


Shigley's

Mechanical Engineering Design



Richard G. Budynas and J. Keith Nisbett

Eighth Edition



Mechanical Engineering

**Shigley's Mechanical Engineering Design,
Eighth Edition**

Budynas–Nisbett

McGraw-Hill

A Division of The McGraw-Hill Companies



McGraw-Hill Primis

ISBN: 0-390-76487-6

Text:

Shigley's Mechanical Engineering Design,
Eighth Edition

Budynas–Nisbett



This book was printed on recycled paper.

Mechanical Engineering

<http://www.primisonline.com>

Copyright ©2006 by The McGraw-Hill Companies, Inc. All rights reserved. Printed in the United States of America. Except as permitted under the United States Copyright Act of 1976, no part of this publication may be reproduced or distributed in any form or by any means, or stored in a database or retrieval system, without prior written permission of the publisher.

This McGraw-Hill Primis text may include materials submitted to McGraw-Hill for publication by the instructor of this course. The instructor is solely responsible for the editorial content of such materials.

Mechanical Engineering

Contents

Budynas–Nisbett • *Shigley’s Mechanical Engineering Design, Eighth Edition*

Front Matter	1
Preface	1
List of Symbols	5
I. Basics	8
Introduction	8
1. Introduction to Mechanical Engineering Design	9
2. Materials	33
3. Load and Stress Analysis	72
4. Deflection and Stiffness	145
II. Failure Prevention	208
Introduction	208
5. Failures Resulting from Static Loading	209
6. Fatigue Failure Resulting from Variable Loading	260
III. Design of Mechanical Elements	349
Introduction	349
7. Shafts and Shaft Components	350
8. Screws, Fasteners, and the Design of Nonpermanent Joints	398
9. Welding, Bonding, and the Design of Permanent Joints	460
10. Mechanical Springs	501
11. Rolling–Contact Bearings	550
12. Lubrication and Journal Bearings	597
13. Gears — General	652
14. Spur and Helical Gears	711
15. Bevel and Worm Gears	762
16. Clutches, Brakes, Couplings, and Flywheels	802
17. Flexible Mechanical Elements	856
18. Power Transmission Case Study	909
IV. Analysis Tools	928
Introduction	928
19. Finite–Element Analysis	929
20. Statistical Considerations	952

Back Matter	978
Appendix A: Useful Tables	978
Appendix B: Answers to Selected Problems	1034
Index	1039

Preface

Objectives

This text is intended for students beginning the study of mechanical engineering design. The focus is on blending fundamental development of concepts with practical specification of components. Students of this text should find that it inherently directs them into familiarity with both the basis for decisions and the standards of industrial components. For this reason, as students transition to practicing engineers, they will find that this text is indispensable as a reference text. The objectives of the text are to:

- Cover the basics of machine design, including the design process, engineering mechanics and materials, failure prevention under static and variable loading, and characteristics of the principal types of mechanical elements.
- Offer a practical approach to the subject through a wide range of real-world applications and examples.
- Encourage readers to link design and analysis.
- Encourage readers to link fundamental concepts with practical component specification.

New to This Edition

This eighth edition contains the following significant enhancements:

- *New chapter on the Finite Element Method.* In response to many requests from reviewers, this edition presents an introductory chapter on the finite element method. The goal of this chapter is to provide an overview of the terminology, method, capabilities, and applications of this tool in the design environment.
- *New transmission case study.* The traditional separation of topics into chapters sometimes leaves students at a loss when it comes time to integrate dependent topics in a larger design process. A comprehensive case study is incorporated through stand-alone example problems in multiple chapters, then culminated with a new chapter that discusses and demonstrates the integration of the parts into a complete design process. Example problems relevant to the case study are presented on engineering paper background to quickly identify them as part of the case study.
- *Revised and expanded coverage of shaft design.* Complementing the new transmission case study is a significantly revised and expanded chapter focusing on issues relevant to shaft design. The motivating goal is to provide a meaningful presentation that allows a new designer to progress through the entire shaft design process – from general shaft layout to specifying dimensions. The chapter has been moved to immediately follow the fatigue chapter, providing an opportunity to seamlessly transition from the fatigue coverage to its application in the design of shafts.
- *Availability of information to complete the details of a design.* Additional focus is placed on ensuring the designer can carry the process through to completion.

By assigning larger design problems in class, the authors have identified where the students lack details. For example, information is now provided for such details as specifying keys to transmit torque, stress concentration factors for keyways and retaining ring grooves, and allowable deflections for gears and bearings. The use of internet catalogs and engineering component search engines is emphasized to obtain current component specifications.

- *Streamlining of presentation.* Coverage of material continues to be streamlined to focus on presenting straightforward concept development and a clear design procedure for student designers.

Content Changes and Reorganization

A new Part 4: *Analysis Tools* has been added at the end of the book to include the new chapter on finite elements and the chapter on statistical considerations. Based on a survey of instructors, the consensus was to move these chapters to the end of the book where they are available to those instructors wishing to use them. Moving the statistical chapter from its former location causes the renumbering of the former chapters 2 through 7. Since the shaft chapter has been moved to immediately follow the fatigue chapter, the component chapters (Chapters 8 through 17) maintain their same numbering. The new organization, along with brief comments on content changes, is given below:

Part 1: Basics

Part 1 provides a logical and unified introduction to the background material needed for machine design. The chapters in Part 1 have received a thorough cleanup to streamline and sharpen the focus, and eliminate clutter.

- *Chapter 1, Introduction.* Some outdated and unnecessary material has been removed. A new section on problem specification introduces the transmission case study.
- *Chapter 2, Materials.* New material is included on selecting materials in a design process. The Ashby charts are included and referenced as a design tool.
- *Chapter 3, Load and Stress Analysis.* Several sections have been rewritten to improve clarity. Bending in two planes is specifically addressed, along with an example problem.
- *Chapter 4, Deflection and Stiffness.* Several sections have been rewritten to improve clarity. A new example problem for deflection of a stepped shaft is included. A new section is included on elastic stability of structural members in compression.

Part 2: Failure Prevention

This section covers failure by static and dynamic loading. These chapters have received extensive cleanup and clarification, targeting student designers.

- *Chapter 5, Failures Resulting from Static Loading.* In addition to extensive cleanup for improved clarity, a summary of important design equations is provided at the end of the chapter.
- *Chapter 6, Fatigue Failure Resulting from Variable Loading.* Confusing material on obtaining and using the S-N diagram is clarified. The multiple methods for obtaining notch sensitivity are condensed. The section on combination loading is rewritten for greater clarity. A chapter summary is provided to overview the analysis roadmap and important design equations used in the process of fatigue analysis.

Part 3: Design of Mechanical Elements

Part 3 covers the design of specific machine components. All chapters have received general cleanup. The shaft chapter has been moved to the beginning of the section. The arrangement of chapters, along with any significant changes, is described below:

- *Chapter 7, Shafts and Shaft Components.* This chapter is significantly expanded and rewritten to be comprehensive in designing shafts. Instructors that previously did not specifically cover the shaft chapter are encouraged to use this chapter immediately following the coverage of fatigue failure. The design of a shaft provides a natural progression from the failure prevention section into application toward components. This chapter is an essential part of the new transmission case study. The coverage of setscrews, keys, pins, and retaining rings, previously placed in the chapter on bolted joints, has been moved into this chapter. The coverage of limits and fits, previously placed in the chapter on statistics, has been moved into this chapter.
- *Chapter 8, Screws, Fasteners, and the Design of Nonpermanent Joints.* The section on setscrews, keys, and pins, has been moved from this chapter to Chapter 7. The coverage of bolted and riveted joints loaded in shear has been returned to this chapter.
- *Chapter 9, Welding, Bonding, and the Design of Permanent Joints.* The section on bolted and riveted joints loaded in shear has been moved to Chapter 8.
- *Chapter 10, Mechanical Springs.*
- *Chapter 11, Rolling-Contact Bearings.*
- *Chapter 12, Lubrication and Journal Bearings.*
- *Chapter 13, Gears – General.* New example problems are included to address design of compound gear trains to achieve specified gear ratios. The discussion of the relationship between torque, speed, and power is clarified.
- *Chapter 14, Spur and Helical Gears.* The current AGMA standard (ANSI/AGMA 2001-D04) has been reviewed to ensure up-to-date information in the gear chapters. All references in this chapter are updated to reflect the current standard.
- *Chapter 15, Bevel and Worm Gears.*
- *Chapter 16, Clutches, Brakes, Couplings, and Flywheels.*
- *Chapter 17, Flexible Mechanical Elements.*
- *Chapter 18, Power Transmission Case Study.* This new chapter provides a complete case study of a double reduction power transmission. The focus is on providing an example for student designers of the process of integrating topics from multiple chapters. Instructors are encouraged to include one of the variations of this case study as a design project in the course. Student feedback consistently shows that this type of project is one of the most valuable aspects of a first course in machine design. This chapter can be utilized in a tutorial fashion for students working through a similar design.

Part 4: Analysis Tools

Part 4 includes a new chapter on finite element methods, and a new location for the chapter on statistical considerations. Instructors can reference these chapters as needed.

- *Chapter 19, Finite Element Analysis.* This chapter is intended to provide an introduction to the finite element method, and particularly its application to the machine design process.

- *Chapter 20, Statistical Considerations.* This chapter is relocated and organized as a tool for users that wish to incorporate statistical concepts into the machine design process. This chapter should be reviewed if Secs. 5–13, 6–17, or Chap. 11 are to be covered.

Supplements

The 8th edition of *Shigley's Mechanical Engineering Design* features McGraw-Hill's ARIS (Assessment Review and Instruction System). ARIS makes homework meaningful—and manageable—for instructors and students. Instructors can assign and grade text-specific homework within the industry's most robust and versatile homework management system. Students can access multimedia learning tools and benefit from unlimited practice via algorithmic problems. Go to aris.mhhe.com to learn more and register!

The array of tools available to users of *Shigley's Mechanical Engineering Design* includes:

Student Supplements

- *Tutorials—Presentation of major concepts, with visuals.* Among the topics covered are pressure vessel design, press and shrink fits, contact stresses, and design for static failure.
- *MATLAB[®] for machine design.* Includes visual simulations and accompanying source code. The simulations are linked to examples and problems in the text and demonstrate the ways computational software can be used in mechanical design and analysis.
- *Fundamentals of engineering (FE) exam questions for machine design.* Interactive problems and solutions serve as effective, self-testing problems as well as excellent preparation for the FE exam.
- *Algorithmic Problems.* Allow step-by-step problem-solving using a recursive computational procedure (algorithm) to create an infinite number of problems.

Instructor Supplements (under password protection)

- *Solutions manual.* The instructor's manual contains solutions to most end-of-chapter nondesign problems.
- *PowerPoint[®] slides.* Slides of important figures and tables from the text are provided in PowerPoint format for use in lectures.

List of Symbols

This is a list of common symbols used in machine design and in this book. Specialized use in a subject-matter area often attracts fore and post subscripts and superscripts. To make the table brief enough to be useful the symbol kernels are listed. See Table 14–1, pp. 715–716 for spur and helical gearing symbols, and Table 15–1, pp. 769–770 for bevel-gear symbols.

A	Area, coefficient
\mathbf{A}	Area variate
a	Distance, regression constant
\hat{a}	Regression constant estimate
\mathbf{a}	Distance variate
B	Coefficient
Bhn	Brinell hardness
\mathbf{B}	Variate
b	Distance, Weibull shape parameter, range number, regression constant, width
\hat{b}	Regression constant estimate
\mathbf{b}	Distance variate
C	Basic load rating, bolted-joint constant, center distance, coefficient of variation, column end condition, correction factor, specific heat capacity, spring index
c	Distance, viscous damping, velocity coefficient
CDF	Cumulative distribution function
COV	Coefficient of variation
\mathbf{c}	Distance variate
D	Helix diameter
d	Diameter, distance
E	Modulus of elasticity, energy, error
e	Distance, eccentricity, efficiency, Napierian logarithmic base
F	Force, fundamental dimension force
f	Coefficient of friction, frequency, function
fom	Figure of merit
G	Torsional modulus of elasticity
g	Acceleration due to gravity, function
H	Heat, power
H_B	Brinell hardness
HRC	Rockwell C-scale hardness
h	Distance, film thickness
\hat{h}_{CR}	Combined overall coefficient of convection and radiation heat transfer
I	Integral, linear impulse, mass moment of inertia, second moment of area
i	Index
\mathbf{i}	Unit vector in x -direction

J	Mechanical equivalent of heat, polar second moment of area, geometry factor
\mathbf{j}	Unit vector in the y -direction
K	Service factor, stress-concentration factor, stress-augmentation factor, torque coefficient
k	Marin endurance limit modifying factor, spring rate
\mathbf{k}	k variate, unit vector in the z -direction
L	Length, life, fundamental dimension length
LN	Lognormal distribution
l	Length
M	Fundamental dimension mass, moment
M	Moment vector, moment variate
m	Mass, slope, strain-strengthening exponent
N	Normal force, number, rotational speed
N	Normal distribution
n	Load factor, rotational speed, safety factor
n_d	Design factor
P	Force, pressure, diametral pitch
PDF	Probability density function
p	Pitch, pressure, probability
Q	First moment of area, imaginary force, volume
q	Distributed load, notch sensitivity
R	Radius, reaction force, reliability, Rockwell hardness, stress ratio
R	Vector reaction force
r	Correlation coefficient, radius
\mathbf{r}	Distance vector
S	Sommerfeld number, strength
S	S variate
s	Distance, sample standard deviation, stress
T	Temperature, tolerance, torque, fundamental dimension time
T	Torque vector, torque variate
t	Distance, Student's t -statistic, time, tolerance
U	Strain energy
U	Uniform distribution
u	Strain energy per unit volume
V	Linear velocity, shear force
v	Linear velocity
W	Cold-work factor, load, weight
W	Weibull distribution
w	Distance, gap, load intensity
\mathbf{w}	Vector distance
X	Coordinate, truncated number
x	Coordinate, true value of a number, Weibull parameter
x	x variate
Y	Coordinate
y	Coordinate, deflection
y	y variate
Z	Coordinate, section modulus, viscosity
z	Standard deviation of the unit normal distribution
z	Variate of z

α	Coefficient, coefficient of linear thermal expansion, end-condition for springs, thread angle
β	Bearing angle, coefficient
Δ	Change, deflection
δ	Deviation, elongation
ϵ	Eccentricity ratio, engineering (normal) strain
ϵ	Normal distribution with a mean of 0 and a standard deviation of s
ε	True or logarithmic normal strain
Γ	Gamma function
γ	Pitch angle, shear strain, specific weight
λ	Slenderness ratio for springs
λ	Unit lognormal with a mean of 1 and a standard deviation equal to COV
μ	Absolute viscosity, population mean
ν	Poisson ratio
ω	Angular velocity, circular frequency
ϕ	Angle, wave length
ψ	Slope integral
ρ	Radius of curvature
σ	Normal stress
σ'	Von Mises stress
σ	Normal stress variate
$\hat{\sigma}$	Standard deviation
τ	Shear stress
τ	Shear stress variate
θ	Angle, Weibull characteristic parameter
ϕ	Cost per unit weight
$\$$	Cost



PART

Basics



Introduction to Mechanical Engineering Design

Chapter Outline

1-1	Design	4
1-2	Mechanical Engineering Design	5
1-3	Phases and Interactions of the Design Process	5
1-4	Design Tools and Resources	8
1-5	The Design Engineer's Professional Responsibilities	10
1-6	Standards and Codes	12
1-7	Economics	12
1-8	Safety and Product Liability	15
1-9	Stress and Strength	15
1-10	Uncertainty	16
1-11	Design Factor and Factor of Safety	17
1-12	Reliability	18
1-13	Dimensions and Tolerances	19
1-14	Units	21
1-15	Calculations and Significant Figures	22
1-16	Power Transmission Case Study Specifications	23

Mechanical design is a complex undertaking, requiring many skills. Extensive relationships need to be subdivided into a series of simple tasks. The complexity of the subject requires a sequence in which ideas are introduced and iterated.

We first address the nature of design in general, and then mechanical engineering design in particular. Design is an iterative process with many interactive phases. Many resources exist to support the designer, including many sources of information and an abundance of computational design tools. The design engineer needs not only to develop competence in their field but must also cultivate a strong sense of responsibility and professional work ethic.

There are roles to be played by codes and standards, ever-present economics, safety, and considerations of product liability. The survival of a mechanical component is often related through stress and strength. Matters of uncertainty are ever-present in engineering design and are typically addressed by the design factor and factor of safety, either in the form of a deterministic (absolute) or statistical sense. The latter, statistical approach, deals with a design's *reliability* and requires good statistical data.

In mechanical design, other considerations include dimensions and tolerances, units, and calculations.

The book consists of four parts. Part 1, *Basics*, begins by explaining some differences between design and analysis and introducing some fundamental notions and approaches to design. It continues with three chapters reviewing material properties, stress analysis, and stiffness and deflection analysis, which are the key principles necessary for the remainder of the book.

Part 2, *Failure Prevention*, consists of two chapters on the prevention of failure of mechanical parts. Why machine parts fail and how they can be designed to prevent failure are difficult questions, and so we take two chapters to answer them, one on preventing failure due to static loads, and the other on preventing fatigue failure due to time-varying, cyclic loads.

In Part 3, *Design of Mechanical Elements*, the material of Parts 1 and 2 is applied to the analysis, selection, and design of specific mechanical elements such as shafts, fasteners, weldments, springs, rolling contact bearings, film bearings, gears, belts, chains, and wire ropes.

Part 4, *Analysis Tools*, provides introductions to two important methods used in mechanical design, finite element analysis and statistical analysis. This is optional study material, but some sections and examples in Parts 1 to 3 demonstrate the use of these tools.

There are two appendixes at the end of the book. Appendix A contains many useful tables referenced throughout the book. Appendix B contains answers to selected end-of-chapter problems.

]-] Design

To design is either to formulate a plan for the satisfaction of a specified need or to solve a problem. If the plan results in the creation of something having a physical reality, then the product must be functional, safe, reliable, competitive, usable, manufacturable, and marketable.

Design is an innovative and highly iterative process. It is also a decision-making process. Decisions sometimes have to be made with too little information, occasionally with just the right amount of information, or with an excess of partially contradictory information. Decisions are sometimes made tentatively, with the right reserved to adjust as more becomes known. The point is that the engineering designer has to be personally comfortable with a decision-making, problem-solving role.

Design is a communication-intensive activity in which both words and pictures are used, and written and oral forms are employed. Engineers have to communicate effectively and work with people of many disciplines. These are important skills, and an engineer's success depends on them.

A designer's personal resources of creativeness, communicative ability, and problem-solving skill are intertwined with knowledge of technology and first principles. Engineering tools (such as mathematics, statistics, computers, graphics, and languages) are combined to produce a plan that, when carried out, produces a product that is *functional, safe, reliable, competitive, usable, manufacturable, and marketable*, regardless of who builds it or who uses it.

1-2 Mechanical Engineering Design

Mechanical engineers are associated with the production and processing of energy and with providing the means of production, the tools of transportation, and the techniques of automation. The skill and knowledge base are extensive. Among the disciplinary bases are mechanics of solids and fluids, mass and momentum transport, manufacturing processes, and electrical and information theory. Mechanical engineering design involves all the disciplines of mechanical engineering.

Real problems resist compartmentalization. A simple journal bearing involves fluid flow, heat transfer, friction, energy transport, material selection, thermomechanical treatments, statistical descriptions, and so on. A building is environmentally controlled. The heating, ventilation, and air-conditioning considerations are sufficiently specialized that some speak of heating, ventilating, and air-conditioning design as if it is separate and distinct from mechanical engineering design. Similarly, internal-combustion engine design, turbomachinery design, and jet-engine design are sometimes considered discrete entities. Here, the leading string of words preceding the word design is merely a product descriptor. Similarly, there are phrases such as machine design, machine-element design, machine-component design, systems design, and fluid-power design. All of these phrases are somewhat more focused *examples* of mechanical engineering design. They all draw on the same bodies of knowledge, are similarly organized, and require similar skills.

1-3 Phases and Interactions of the Design Process

What is the design process? How does it begin? Does the engineer simply sit down at a desk with a blank sheet of paper and jot down some ideas? What happens next? What factors influence or control the decisions that have to be made? Finally, how does the design process end?

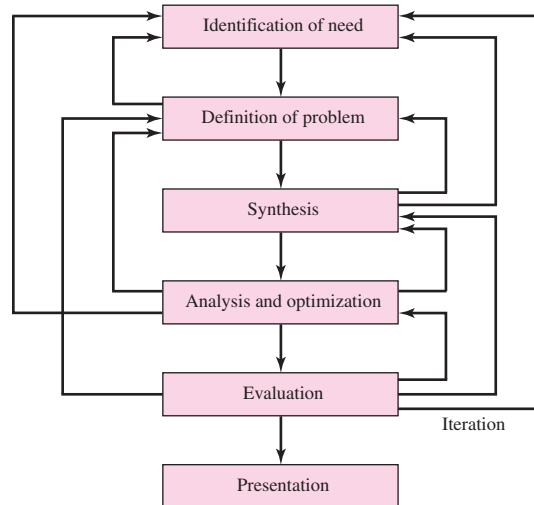
The complete design process, from start to finish, is often outlined as in Fig. 1-1. The process begins with an identification of a need and a decision to do something about it. After many iterations, the process ends with the presentation of the plans for satisfying the need. Depending on the nature of the design task, several design phases may be repeated throughout the life of the product, from inception to termination. In the next several subsections, we shall examine these steps in the design process in detail.

Identification of need generally starts the design process. Recognition of the need and phrasing the need often constitute a highly creative act, because the need may be only a vague discontent, a feeling of uneasiness, or a sensing that something is not right. The need is often not evident at all; recognition is usually triggered by a particular

6 Mechanical Engineering Design

Figure 1-1

The phases in design, acknowledging the many feedbacks and iterations.



adverse circumstance or a set of random circumstances that arises almost simultaneously. For example, the need to do something about a food-packaging machine may be indicated by the noise level, by a variation in package weight, and by slight but perceptible variations in the quality of the packaging or wrap.

There is a distinct difference between the statement of the need and the definition of the problem. The *definition of problem* is more specific and must include all the specifications for the object that is to be designed. The specifications are the input and output quantities, the characteristics and dimensions of the space the object must occupy, and all the limitations on these quantities. We can regard the object to be designed as something in a black box. In this case we must specify the inputs and outputs of the box, together with their characteristics and limitations. The specifications define the cost, the number to be manufactured, the expected life, the range, the operating temperature, and the reliability. Specified characteristics can include the speeds, feeds, temperature limitations, maximum range, expected variations in the variables, dimensional and weight limitations, etc.

There are many implied specifications that result either from the designer's particular environment or from the nature of the problem itself. The manufacturing processes that are available, together with the facilities of a certain plant, constitute restrictions on a designer's freedom, and hence are a part of the implied specifications. It may be that a small plant, for instance, does not own cold-working machinery. Knowing this, the designer might select other metal-processing methods that can be performed in the plant. The labor skills available and the competitive situation also constitute implied constraints. Anything that limits the designer's freedom of choice is a constraint. Many materials and sizes are listed in supplier's catalogs, for instance, but these are not all easily available and shortages frequently occur. Furthermore, inventory economics requires that a manufacturer stock a minimum number of materials and sizes. An example of a specification is given in Sec. 1-16. This example is for a case study of a power transmission that is presented throughout this text.

The synthesis of a scheme connecting possible system elements is sometimes called the *invention of the concept* or *concept design*. This is the first and most important step in the synthesis task. Various schemes must be proposed, investigated, and

quantified in terms of established metrics.¹ As the fleshing out of the scheme progresses, analyses must be performed to assess whether the system performance is satisfactory or better, and, if satisfactory, just how well it will perform. System schemes that do not survive analysis are revised, improved, or discarded. Those with potential are optimized to determine the best performance of which the scheme is capable. Competing schemes are compared so that the path leading to the most competitive product can be chosen. Figure 1–1 shows that *synthesis* and *analysis and optimization* are intimately and iteratively related.

We have noted, and we emphasize, that design is an iterative process in which we proceed through several steps, evaluate the results, and then return to an earlier phase of the procedure. Thus, we may synthesize several components of a system, analyze and optimize them, and return to synthesis to see what effect this has on the remaining parts of the system. For example, the design of a system to transmit power requires attention to the design and selection of individual components (e.g., gears, bearings, shaft). However, as is often the case in design, these components are not independent. In order to design the shaft for stress and deflection, it is necessary to know the applied forces. If the forces are transmitted through gears, it is necessary to know the gear specifications in order to determine the forces that will be transmitted to the shaft. But stock gears come with certain bore sizes, requiring knowledge of the necessary shaft diameter. Clearly, rough estimates will need to be made in order to proceed through the process, refining and iterating until a final design is obtained that is satisfactory for each individual component as well as for the overall design specifications. Throughout the text we will elaborate on this process for the case study of a power transmission design.

Both analysis and optimization require that we construct or devise abstract models of the system that will admit some form of mathematical analysis. We call these models mathematical models. In creating them it is our hope that we can find one that will simulate the real physical system very well. As indicated in Fig. 1–1, *evaluation* is a significant phase of the total design process. Evaluation is the final proof of a successful design and usually involves the testing of a prototype in the laboratory. Here we wish to discover if the design really satisfies the needs. Is it reliable? Will it compete successfully with similar products? Is it economical to manufacture and to use? Is it easily maintained and adjusted? Can a profit be made from its sale or use? How likely is it to result in product-liability lawsuits? And is insurance easily and cheaply obtained? Is it likely that recalls will be needed to replace defective parts or systems?

Communicating the design to others is the final, vital *presentation* step in the design process. Undoubtedly, many great designs, inventions, and creative works have been lost to posterity simply because the originators were unable or unwilling to explain their accomplishments to others. Presentation is a selling job. The engineer, when presenting a new solution to administrative, management, or supervisory persons, is attempting to sell or to prove to them that this solution is a better one. Unless this can be done successfully, the time and effort spent on obtaining the solution have been largely wasted. When designers sell a new idea, they also sell themselves. If they are repeatedly successful in selling ideas, designs, and new solutions to management, they begin to receive salary increases and promotions; in fact, this is how anyone succeeds in his or her profession.

¹An excellent reference for this topic is presented by Stuart Pugh, *Total Design—Integrated Methods for Successful Product Engineering*, Addison-Wesley, 1991. A description of the *Pugh method* is also provided in Chap. 8, David G. Ullman, *The Mechanical Design Process*, 3rd ed., McGraw-Hill, 2003.

Design Considerations

Sometimes the strength required of an element in a system is an important factor in the determination of the geometry and the dimensions of the element. In such a situation we say that strength is an important design consideration. When we use the expression design consideration, we are referring to some characteristic that influences the design of the element or, perhaps, the entire system. Usually quite a number of such characteristics must be considered and prioritized in a given design situation. Many of the important ones are as follows (not necessarily in order of importance):

1	Functionality	14	Noise
2	Strength/stress	15	Styling
3	Distortion/deflection/stiffness	16	Shape
4	Wear	17	Size
5	Corrosion	18	Control
6	Safety	19	Thermal properties
7	Reliability	20	Surface
8	Manufacturability	21	Lubrication
9	Utility	22	Marketability
10	Cost	23	Maintenance
11	Friction	24	Volume
12	Weight	25	Liability
13	Life	26	Remanufacturing/resource recovery

Some of these characteristics have to do directly with the dimensions, the material, the processing, and the joining of the elements of the system. Several characteristics may be interrelated, which affects the configuration of the total system.

1-4 Design Tools and Resources

Today, the engineer has a great variety of tools and resources available to assist in the solution of design problems. Inexpensive microcomputers and robust computer software packages provide tools of immense capability for the design, analysis, and simulation of mechanical components. In addition to these tools, the engineer always needs technical information, either in the form of basic science/engineering behavior or the characteristics of specific off-the-shelf components. Here, the resources can range from science/engineering textbooks to manufacturers' brochures or catalogs. Here too, the computer can play a major role in gathering information.²

Computational Tools

Computer-aided design (CAD) software allows the development of three-dimensional (3-D) designs from which conventional two-dimensional orthographic views with automatic dimensioning can be produced. Manufacturing tool paths can be generated from the 3-D models, and in some cases, parts can be created directly from a 3-D database by using a rapid prototyping and manufacturing method (stereolithography)—*paperless manufacturing!* Another advantage of a 3-D database is that it allows rapid and accurate calculations of mass properties such as mass, location of the center of gravity, and mass moments of inertia. Other geometric properties such as areas and distances between points are likewise easily obtained. There are a great many CAD software packages available such

²An excellent and comprehensive discussion of the process of “gathering information” can be found in Chap. 4, George E. Dieter, *Engineering Design, A Materials and Processing Approach*, 3rd ed., McGraw-Hill, New York, 2000.

as Aries, AutoCAD, CadKey, I-Deas, Unigraphics, Solid Works, and ProEngineer, to name a few.

The term *computer-aided engineering* (CAE) generally applies to all computer-related engineering applications. With this definition, CAD can be considered as a subset of CAE. Some computer software packages perform specific engineering analysis and/or simulation tasks that assist the designer, but they are not considered a tool for the creation of the design that CAD is. Such software fits into two categories: engineering-based and non-engineering-specific. Some examples of engineering-based software for mechanical engineering applications—software that might also be integrated within a CAD system—include finite-element analysis (FEA) programs for analysis of stress and deflection (see Chap. 19), vibration, and heat transfer (e.g., Algor, ANSYS, and MSC/NASTRAN); computational fluid dynamics (CFD) programs for fluid-flow analysis and simulation (e.g., CFD++, FIDAP, and Fluent); and programs for simulation of dynamic force and motion in mechanisms (e.g., ADAMS, DADS, and Working Model).

Examples of non-engineering-specific computer-aided applications include software for word processing, spreadsheet software (e.g., Excel, Lotus, and Quattro-Pro), and mathematical solvers (e.g., Maple, MathCad, Matlab, Mathematica, and TKSolver).

Your instructor is the best source of information about programs that may be available to you and can recommend those that are useful for specific tasks. One caution, however: Computer software is no substitute for the human thought process. *You* are the driver here; the computer is the vehicle to assist you on your journey to a solution. Numbers generated by a computer can be far from the truth if you entered incorrect input, if you misinterpreted the application or the output of the program, if the program contained bugs, etc. It is your responsibility to assure the validity of the results, so be careful to check the application and results carefully, perform benchmark testing by submitting problems with known solutions, and monitor the software company and user-group newsletters.

Acquiring Technical Information

We currently live in what is referred to as the *information age*, where information is generated at an astounding pace. It is difficult, but extremely important, to keep abreast of past and current developments in one's field of study and occupation. The reference in Footnote 2 provides an excellent description of the informational resources available and is highly recommended reading for the serious design engineer. Some sources of information are:

- *Libraries (community, university, and private)*. Engineering dictionaries and encyclopedias, textbooks, monographs, handbooks, indexing and abstract services, journals, translations, technical reports, patents, and business sources/brochures/catalogs.
- *Government sources*. Departments of Defense, Commerce, Energy, and Transportation; NASA; Government Printing Office; U.S. Patent and Trademark Office; National Technical Information Service; and National Institute for Standards and Technology.
- *Professional societies*. American Society of Mechanical Engineers, Society of Manufacturing Engineers, Society of Automotive Engineers, American Society for Testing and Materials, and American Welding Society.
- *Commercial vendors*. Catalogs, technical literature, test data, samples, and cost information.
- *Internet*. The computer network gateway to websites associated with most of the categories listed above.³

³Some helpful Web resources, to name a few, include www.globalspec.com, www.engnetglobal.com, www.efunda.com, www.thomasnet.com, and www.uspto.gov.

This list is not complete. The reader is urged to explore the various sources of information on a regular basis and keep records of the knowledge gained.

1–5 The Design Engineer's Professional Responsibilities

In general, the design engineer is required to satisfy the needs of customers (management, clients, consumers, etc.) and is expected to do so in a competent, responsible, ethical, and professional manner. Much of engineering course work and practical experience focuses on competence, but when does one begin to develop engineering responsibility and professionalism? To start on the road to success, you should start to develop these characteristics early in your educational program. You need to cultivate your professional work ethic and process skills before graduation, so that when you begin your formal engineering career, you will be prepared to meet the challenges.

It is not obvious to some students, but communication skills play a large role here, and it is the wise student who continuously works to improve these skills—even if it is not a direct requirement of a course assignment! Success in engineering (achievements, promotions, raises, etc.) may in large part be due to competence but if you cannot communicate your ideas clearly and concisely, your technical proficiency may be compromised.

You can start to develop your communication skills by keeping a neat and clear journal/logbook of your activities, entering dated entries frequently. (Many companies require their engineers to keep a journal for patent and liability concerns.) Separate journals should be used for each design project (or course subject). When starting a project or problem, in the definition stage, make journal entries quite frequently. Others, as well as yourself, may later question why you made certain decisions. Good chronological records will make it easier to explain your decisions at a later date.

Many engineering students see themselves after graduation as practicing engineers designing, developing, and analyzing products and processes and consider the need of good communication skills, either oral or writing, as secondary. This is far from the truth. Most practicing engineers spend a good deal of time communicating with others, writing proposals and technical reports, and giving presentations and interacting with engineering and nonengineering support personnel. You have the time now to sharpen your communication skills. When given an assignment to write or make any presentation, technical *or* nontechnical, accept it enthusiastically, and work on improving your communication skills. It will be time well spent to learn the skills now rather than on the job.

When you are working on a design problem, it is important that you develop a systematic approach. Careful attention to the following action steps will help you to organize your solution processing technique.

- *Understand the problem.* Problem definition is probably the most significant step in the engineering design process. Carefully read, understand, and refine the problem statement.
- *Identify the known.* From the refined problem statement, describe concisely what information is known and relevant.
- *Identify the unknown and formulate the solution strategy.* State what must be determined, in what order, so as to arrive at a solution to the problem. Sketch the component or system under investigation, identifying known and unknown parameters. Create a flowchart of the steps necessary to reach the final solution. The steps may require the use of free-body diagrams; material properties from tables; equations

from first principles, textbooks, or handbooks relating the known and unknown parameters; experimentally or numerically based charts; specific computational tools as discussed in Sec. 1–4; etc.

- *State all assumptions and decisions.* Real design problems generally do not have unique, ideal, closed-form solutions. Selections, such as choice of materials, and heat treatments, require decisions. Analyses require assumptions related to the modeling of the real components or system. All assumptions and decisions should be identified and recorded.
- *Analyze the problem.* Using your solution strategy in conjunction with your decisions and assumptions, execute the analysis of the problem. Reference the sources of all equations, tables, charts, software results, etc. Check the credibility of your results. Check the order of magnitude, dimensionality, trends, signs, etc.
- *Evaluate your solution.* Evaluate each step in the solution, noting how changes in strategy, decisions, assumptions, and execution might change the results, in positive or negative ways. If possible, incorporate the positive changes in your final solution.
- *Present your solution.* Here is where your communication skills are important. At this point, you are selling yourself and your technical abilities. If you cannot skillfully explain what you have done, some or all of your work may be misunderstood and unaccepted. Know your audience.

As stated earlier, all design processes are interactive and iterative. Thus, it may be necessary to repeat some or all of the above steps more than once if less than satisfactory results are obtained.

In order to be effective, all professionals must keep current in their fields of endeavor. The design engineer can satisfy this in a number of ways by: being an active member of a professional society such as the American Society of Mechanical Engineers (ASME), the Society of Automotive Engineers (SAE), and the Society of Manufacturing Engineers (SME); attending meetings, conferences, and seminars of societies, manufacturers, universities, etc.; taking specific graduate courses or programs at universities; regularly reading technical and professional journals; etc. An engineer's education does not end at graduation.

The design engineer's professional obligations include conducting activities in an ethical manner. Reproduced here is the *Engineers' Creed* from the National Society of Professional Engineers (NSPE)⁴:

As a Professional Engineer I dedicate my professional knowledge and skill to the advancement and betterment of human welfare.

I pledge:

To give the utmost of performance;

To participate in none but honest enterprise;

To live and work according to the laws of man and the highest standards of professional conduct;

To place service before profit, the honor and standing of the profession before personal advantage, and the public welfare above all other considerations.

In humility and with need for Divine Guidance, I make this pledge.

⁴Adopted by the National Society of Professional Engineers, June 1954. "The Engineer's Creed." Reprinted by permission of the National Society of Professional Engineers. This has been expanded and revised by NSPE. For the current revision, January 2006, see the website www.nspe.org/ethics/ehl-code.asp, or the pdf file, www.nspe.org/ethics/code-2006-Jan.pdf.

1–6 Standards and Codes

A *standard* is a set of specifications for parts, materials, or processes intended to achieve uniformity, efficiency, and a specified quality. One of the important purposes of a standard is to place a limit on the number of items in the specifications so as to provide a reasonable inventory of tooling, sizes, shapes, and varieties.

A *code* is a set of specifications for the analysis, design, manufacture, and construction of something. The purpose of a code is to achieve a specified degree of safety, efficiency, and performance or quality. It is important to observe that safety codes *do not* imply *absolute safety*. In fact, absolute safety is impossible to obtain. Sometimes the unexpected event really does happen. Designing a building to withstand a 120 mi/h wind does not mean that the designers think a 140 mi/h wind is impossible; it simply means that they think it is highly improbable.

All of the organizations and societies listed below have established specifications for standards and safety or design codes. The name of the organization provides a clue to the nature of the standard or code. Some of the standards and codes, as well as addresses, can be obtained in most technical libraries. The organizations of interest to mechanical engineers are:

- Aluminum Association (AA)
- American Gear Manufacturers Association (AGMA)
- American Institute of Steel Construction (AISC)
- American Iron and Steel Institute (AISI)
- American National Standards Institute (ANSI)⁵
- ASM International⁶
- American Society of Mechanical Engineers (ASME)
- American Society of Testing and Materials (ASTM)
- American Welding Society (AWS)
- American Bearing Manufacturers Association (ABMA)⁷
- British Standards Institution (BSI)
- Industrial Fasteners Institute (IFI)
- Institution of Mechanical Engineers (I. Mech. E.)
- International Bureau of Weights and Measures (BIPM)
- International Standards Organization (ISO)
- National Institute for Standards and Technology (NIST)⁸
- Society of Automotive Engineers (SAE)

1–7 Economics

The consideration of cost plays such an important role in the design decision process that we could easily spend as much time in studying the cost factor as in the study of the entire subject of design. Here we introduce only a few general concepts and simple rules.

⁵In 1966 the American Standards Association (ASA) changed its name to the United States of America Standards Institute (USAS). Then, in 1969, the name was again changed, to American National Standards Institute, as shown above and as it is today. This means that you may occasionally find ANSI standards designated as ASA or USAS.

⁶Formally American Society for Metals (ASM). Currently the acronym ASM is undefined.

⁷In 1993 the Anti-Friction Bearing Manufacturers Association (AFBMA) changed its name to the American Bearing Manufacturers Association (ABMA).

⁸Former National Bureau of Standards (NBS).

First, observe that nothing can be said in an absolute sense concerning costs. Materials and labor usually show an increasing cost from year to year. But the costs of processing the materials can be expected to exhibit a decreasing trend because of the use of automated machine tools and robots. The cost of manufacturing a single product will vary from city to city and from one plant to another because of overhead, labor, taxes, and freight differentials and the inevitable slight manufacturing variations.

Standard Sizes

The use of standard or stock sizes is a first principle of cost reduction. An engineer who specifies an AISI 1020 bar of hot-rolled steel 53 mm square has added cost to the product, provided that a bar 50 or 60 mm square, both of which are preferred sizes, would do equally well. The 53-mm size can be obtained by special order or by rolling or machining a 60-mm square, but these approaches add cost to the product. To ensure that standard or preferred sizes are specified, designers must have access to stock lists of the materials they employ.

A further word of caution regarding the selection of preferred sizes is necessary. Although a great many sizes are usually listed in catalogs, they are not all readily available. Some sizes are used so infrequently that they are not stocked. A rush order for such sizes may mean more on expense and delay. Thus you should also have access to a list such as those in Table A–17 for preferred inch and millimeter sizes.

There are many purchased parts, such as motors, pumps, bearings, and fasteners, that are specified by designers. In the case of these, too, you should make a special effort to specify parts that are readily available. Parts that are made and sold in large quantities usually cost somewhat less than the odd sizes. The cost of rolling bearings, for example, depends more on the quantity of production by the bearing manufacturer than on the size of the bearing.

Large Tolerances

Among the effects of design specifications on costs, tolerances are perhaps most significant. Tolerances, manufacturing processes, and surface finish are interrelated and influence the producibility of the end product in many ways. Close tolerances may necessitate additional steps in processing and inspection or even render a part completely impractical to produce economically. Tolerances cover dimensional variation and surface-roughness range and also the variation in mechanical properties resulting from heat treatment and other processing operations.

Since parts having large tolerances can often be produced by machines with higher production rates, costs will be significantly smaller. Also, fewer such parts will be rejected in the inspection process, and they are usually easier to assemble. A plot of cost versus tolerance/machining process is shown in Fig. 1–2, and illustrates the drastic increase in manufacturing cost as tolerance diminishes with finer machining processing.

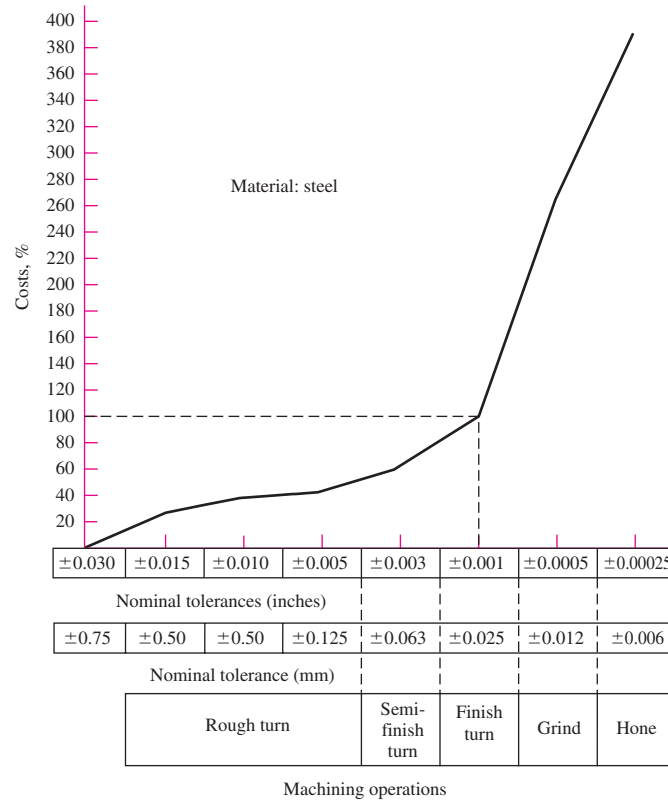
Breakeven Points

Sometimes it happens that, when two or more design approaches are compared for cost, the choice between the two depends on a set of conditions such as the quantity of production, the speed of the assembly lines, or some other condition. There then occurs a point corresponding to equal cost, which is called the *breakeven point*.

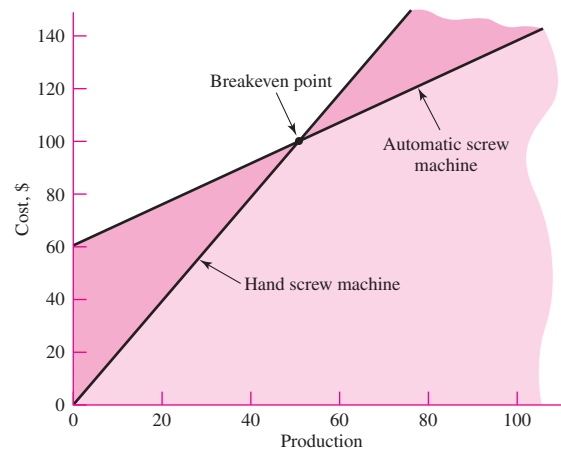
14 Mechanical Engineering Design

Figure 1-2

Cost versus tolerance/
machining process.
(From David G. Ullman, *The
Mechanical Design Process*,
3rd ed., McGraw-Hill, New
York, 2003.)

**Figure 1-3**

A breakeven point.



As an example, consider a situation in which a certain part can be manufactured at the rate of 25 parts per hour on an automatic screw machine or 10 parts per hour on a hand screw machine. Let us suppose, too, that the setup time for the automatic is 3 h and that the labor cost for either machine is \$20 per hour, including overhead. Figure 1-3 is a graph of cost versus production by the two methods. The breakeven point for this example corresponds to 50 parts. If the desired production is greater than 50 parts, the automatic machine should be used.

Cost Estimates

There are many ways of obtaining relative cost figures so that two or more designs can be roughly compared. A certain amount of judgment may be required in some instances. For example, we can compare the relative value of two automobiles by comparing the dollar cost per pound of weight. Another way to compare the cost of one design with another is simply to count the number of parts. The design having the smaller number of parts is likely to cost less. Many other cost estimators can be used, depending upon the application, such as area, volume, horsepower, torque, capacity, speed, and various performance ratios.⁹

1–8 Safety and Product Liability

The *strict liability* concept of product liability generally prevails in the United States. This concept states that the manufacturer of an article is liable for any damage or harm that results because of a defect. And it doesn't matter whether the manufacturer knew about the defect, or even could have known about it. For example, suppose an article was manufactured, say, 10 years ago. And suppose at that time the article could not have been considered defective on the basis of all technological knowledge then available. Ten years later, according to the concept of strict liability, the manufacturer is still liable. Thus, under this concept, the plaintiff needs only to prove that the article was defective and that the defect caused some damage or harm. Negligence of the manufacturer need not be proved.

The best approaches to the prevention of product liability are good engineering in analysis and design, quality control, and comprehensive testing procedures. Advertising managers often make glowing promises in the warranties and sales literature for a product. These statements should be reviewed carefully by the engineering staff to eliminate excessive promises and to insert adequate warnings and instructions for use.

1–9 Stress and Strength

The survival of many products depends on how the designer adjusts the maximum stresses in a component to be less than the component's strength at specific locations of interest. The designer must allow the maximum stress to be less than the strength by a sufficient margin so that despite the uncertainties, failure is rare.

In focusing on the stress-strength comparison at a critical (controlling) location, we often look for "strength in the geometry and condition of use." Strengths are the magnitudes of stresses at which something of interest occurs, such as the proportional limit, 0.2 percent-offset yielding, or fracture. In many cases, such events represent the stress level at which loss of function occurs.

Strength is a property of a material or of a mechanical element. The strength of an element depends on the choice, the treatment, and the processing of the material. Consider, for example, a shipment of springs. We can associate a strength with a specific spring. When this spring is incorporated into a machine, external forces are applied that result in load-induced stresses in the spring, the magnitudes of which depend on its geometry and are independent of the material and its processing. If the spring is removed from the machine unharmed, the stress due to the external forces will return

⁹For an overview of estimating manufacturing costs, see Chap. 11, Karl T. Ulrich and Steven D. Eppinger, *Product Design and Development*, 3rd ed., McGraw-Hill, New York, 2004.

to zero. But the strength remains as one of the properties of the spring. Remember, then, that *strength is an inherent property of a part*, a property built into the part because of the use of a particular material and process.

Various metalworking and heat-treating processes, such as forging, rolling, and cold forming, cause variations in the strength from point to point throughout a part. The spring cited above is quite likely to have a strength on the outside of the coils different from its strength on the inside because the spring has been formed by a cold winding process, and the two sides may not have been deformed by the same amount. Remember, too, therefore, that a strength value given for a part may apply to only a particular point or set of points on the part.

In this book we shall use the capital letter S to denote strength, with appropriate subscripts to denote the type of strength. Thus, S_s is a shear strength, S_y a yield strength, and S_u an ultimate strength.

In accordance with accepted engineering practice, we shall employ the Greek letters σ (sigma) and τ (tau) to designate normal and shear stresses, respectively. Again, various subscripts will indicate some special characteristic. For example, σ_1 is a principal stress, σ_y a stress component in the y direction, and σ_r a stress component in the radial direction.

Stress is a state property at a *specific* point within a body, which is a function of load, geometry, temperature, and manufacturing processing. In an elementary course in mechanics of materials, stress related to load and geometry is emphasized with some discussion of thermal stresses. However, stresses due to heat treatments, molding, assembly, etc. are also important and are sometimes neglected. A review of stress analysis for basic load states and geometry is given in Chap. 3.

1-10 Uncertainty

Uncertainties in machinery design abound. Examples of uncertainties concerning stress and strength include

- Composition of material and the effect of variation on properties.
- Variations in properties from place to place within a bar of stock.
- Effect of processing locally, or nearby, on properties.
- Effect of nearby assemblies such as weldments and shrink fits on stress conditions.
- Effect of thermomechanical treatment on properties.
- Intensity and distribution of loading.
- Validity of mathematical models used to represent reality.
- Intensity of stress concentrations.
- Influence of time on strength and geometry.
- Effect of corrosion.
- Effect of wear.
- Uncertainty as to the length of any list of uncertainties.

Engineers must accommodate uncertainty. Uncertainty always accompanies change. Material properties, load variability, fabrication fidelity, and validity of mathematical models are among concerns to designers.

There are mathematical methods to address uncertainties. The primary techniques are the deterministic and stochastic methods. The deterministic method establishes a

design factor based on the absolute uncertainties of a loss-of-function parameter and a maximum allowable parameter. Here the parameter can be load, stress, deflection, etc. Thus, the design factor n_d is defined as

$$n_d = \frac{\text{loss-of-function parameter}}{\text{maximum allowable parameter}} \quad (1-1)$$

If the parameter is load, then the maximum allowable load can be found from

$$\text{Maximum allowable load} = \frac{\text{loss-of-function load}}{n_d} \quad (1-2)$$

EXAMPLE 1-1

Consider that the maximum load on a structure is known with an uncertainty of ± 20 percent, and the load causing failure is known within ± 15 percent. If the load causing failure is *nominally* 2000 lbf, determine the design factor and the maximum allowable load that will offset the absolute uncertainties.

Solution

To account for its uncertainty, the loss-of-function load must increase to $1/0.85$, whereas the maximum allowable load must decrease to $1/1.2$. Thus to offset the absolute uncertainties the design factor should be

Answer

$$n_d = \frac{1/0.85}{1/1.2} = 1.4$$

From Eq. (1-2), the maximum allowable load is found to be

Answer

$$\text{Maximum allowable load} = \frac{2000}{1.4} = 1400 \text{ lbf}$$

Stochastic methods (see Chap. 20) are based on the statistical nature of the design parameters and focus on the probability of survival of the design's function (that is, on reliability). Sections 5-13 and 6-17 demonstrate how this is accomplished.

1-11

Design Factor and Factor of Safety

A general approach to the allowable load versus loss-of-function load problem is the deterministic design factor method, and sometimes called the classical method of design. The fundamental equation is Eq. (1-1) where n_d is called the *design factor*. All loss-of-function modes must be analyzed, and the mode leading to the smallest design factor governs. After the design is completed, the *actual* design factor may change as a result of changes such as rounding up to a standard size for a cross section or using off-the-shelf components with higher ratings instead of employing what is calculated by using the design factor. The factor is then referred to as the *factor of safety*, n . The factor of safety has the same definition as the design factor, but it generally differs numerically.

Since stress may not vary linearly with load (see Sec. 3-19), using load as the loss-of-function parameter may not be acceptable. It is more common then to express

the design factor in terms of a stress and a relevant strength. Thus Eq. (1–1) can be rewritten as

$$n_d = \frac{\text{loss-of-function strength}}{\text{allowable stress}} = \frac{S}{\sigma(\text{or } \tau)} \quad (1-3)$$

The stress and strength terms in Eq. (1–3) must be of the same type and units. Also, the stress and strength must apply to the same critical location in the part.

EXAMPLE 1-2

A rod with a cross-sectional area of A and loaded in tension with an axial force of $P = 2000$ lbf undergoes a stress of $\sigma = P/A$. Using a material strength of 24 kpsi and a *design factor* of 3.0, determine the minimum diameter of a solid circular rod. Using Table A–17, select a preferred fractional diameter and determine the rod's *factor of safety*.

Solution Since $A = \pi d^2/4$, and $\sigma = S/n_d$, then

$$\sigma = \frac{S}{n_d} = \frac{24\,000}{3} = \frac{P}{A} = \frac{2\,000}{\pi d^2/4}$$

or,

Answer
$$d = \left(\frac{4Pn_d}{\pi S} \right)^{1/2} = \left(\frac{4(2000)3}{\pi(24\,000)} \right)^{1/2} = 0.564 \text{ in}$$

From Table A–17, the next higher preferred size is $\frac{5}{8}$ in = 0.625 in. Thus, according to the same equation developed earlier, the factor of safety n is

Answer
$$n = \frac{\pi S d^2}{4P} = \frac{\pi(24\,000)(0.625)^2}{4(2000)} = 3.68$$

Thus rounding the diameter has increased the actual design factor.

1-12 Reliability

In these days of greatly increasing numbers of liability lawsuits and the need to conform to regulations issued by governmental agencies such as EPA and OSHA, it is very important for the designer and the manufacturer to know the reliability of their product. The reliability method of design is one in which we obtain the distribution of stresses and the distribution of strengths and then relate these two in order to achieve an acceptable success rate.

The statistical measure of the probability that a mechanical element will not fail in use is called the *reliability* of that element. The reliability R can be expressed by a number having the range $0 \leq R \leq 1$. A reliability of $R = 0.90$ means that there is a 90 percent chance that the part will perform its proper function without failure. The failure of 6 parts out of every 1000 manufactured might be considered an acceptable failure rate for a certain class of products. This represents a reliability of

$$R = 1 - \frac{6}{1000} = 0.994$$

or 99.4 percent.

In the *reliability method of design*, the designer's task is to make a judicious selection of materials, processes, and geometry (size) so as to achieve a specific reliability goal. Thus, if the objective reliability is to be 99.4 percent, as above, what combination of materials, processing, and dimensions is needed to meet this goal?

Analyses that lead to an assessment of reliability address uncertainties, or their estimates, in parameters that describe the situation. Stochastic variables such as stress, strength, load, or size are described in terms of their means, standard deviations, and distributions. If bearing balls are produced by a manufacturing process in which a diameter distribution is created, we can say upon choosing a ball that there is uncertainty as to size. If we wish to consider weight or moment of inertia in rolling, this size uncertainty can be considered to be *propagated* to our knowledge of weight or inertia. There are ways of estimating the statistical parameters describing weight and inertia from those describing size and density. These methods are variously called *propagation of error*, *propagation of uncertainty*, or *propagation of dispersion*. These methods are integral parts of analysis or synthesis tasks when probability of failure is involved.

It is important to note that good statistical data and estimates are essential to perform an acceptable reliability analysis. This requires a good deal of testing and validation of the data. In many cases, this is not practical and a deterministic approach to the design must be undertaken.

1-13 Dimensions and Tolerances

The following terms are used generally in dimensioning:

- *Nominal size*. The size we use in speaking of an element. For example, we may specify a $1\frac{1}{2}$ -in pipe or a $\frac{1}{2}$ -in bolt. Either the theoretical size or the actual measured size may be quite different. The theoretical size of a $1\frac{1}{2}$ -in pipe is 1.900 in for the outside diameter. And the diameter of the $\frac{1}{2}$ -in bolt, say, may actually measure 0.492 in.
- *Limits*. The stated maximum and minimum dimensions.
- *Tolerance*. The difference between the two limits.
- *Bilateral tolerance*. The variation in both directions from the basic dimension. That is, the basic size is between the two limits, for example, 1.005 ± 0.002 in. The two parts of the tolerance need not be equal.
- *Unilateral tolerance*. The basic dimension is taken as one of the limits, and variation is permitted in only one direction, for example,

$$1.005 \begin{matrix} +0.004 \\ -0.000 \end{matrix} \text{ in}$$

- *Clearance*. A general term that refers to the mating of cylindrical parts such as a bolt and a hole. The word clearance is used only when the internal member is smaller than the external member. The *diametral clearance* is the measured difference in the two diameters. The *radial clearance* is the difference in the two radii.
- *Interference*. The opposite of clearance, for mating cylindrical parts in which the internal member is larger than the external member.
- *Allowance*. The minimum stated clearance or the maximum stated interference for mating parts.

When several parts are assembled, the gap (or interference) depends on the dimensions and tolerances of the individual parts.

EXAMPLE 1-3

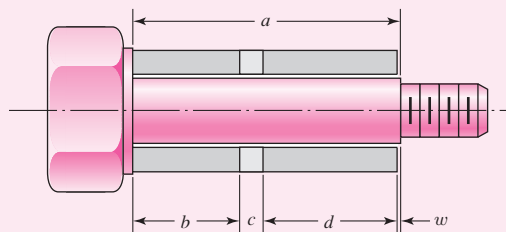
A shouldered screw contains three hollow right circular cylindrical parts on the screw before a nut is tightened against the shoulder. To sustain the function, the gap w must equal or exceed 0.003 in. The parts in the assembly depicted in Fig. 1-4 have dimensions and tolerances as follows:

$$a = 1.750 \pm 0.003 \text{ in} \quad b = 0.750 \pm 0.001 \text{ in}$$

$$c = 0.120 \pm 0.005 \text{ in} \quad d = 0.875 \pm 0.001 \text{ in}$$

Figure 1-4

An assembly of three cylindrical sleeves of lengths a , b , and c on a shoulder bolt shank of length a . The gap w is of interest.



All parts except the part with the dimension d are supplied by vendors. The part containing the dimension d is made in-house.

- (a) Estimate the mean and tolerance on the gap w .
 (b) What basic value of d will assure that $w \geq 0.003$ in?

Solution (a) The mean value of w is given by

$$\bar{w} = \bar{a} - \bar{b} - \bar{c} - \bar{d} = 1.750 - 0.750 - 0.120 - 0.875 = 0.005 \text{ in}$$

For equal bilateral tolerances, the tolerance of the gap is

$$t_w = \sum_{\text{all}} t = 0.003 + 0.001 + 0.005 + 0.001 = 0.010 \text{ in}$$

Then, $w = 0.005 \pm 0.010$, and

$$w_{\max} = \bar{w} + t_w = 0.005 + 0.010 = 0.015 \text{ in}$$

$$w_{\min} = \bar{w} - t_w = 0.005 - 0.010 = -0.005 \text{ in}$$

Thus, both clearance and interference are possible.

(b) If w_{\min} is to be 0.003 in, then, $\bar{w} = w_{\min} + t_w = 0.003 + 0.010 = 0.013$ in. Thus,

$$\bar{d} = \bar{a} - \bar{b} - \bar{c} - \bar{w} = 1.750 - 0.750 - 0.120 - 0.013 = 0.867 \text{ in}$$

The previous example represented an *absolute tolerance system*. Statistically, gap dimensions near the gap limits are rare events. Using a *statistical tolerance system*, the probability that the gap falls within a given limit is determined.¹⁰ This probability deals with the statistical distributions of the individual dimensions. For example, if the distributions of the dimensions in the previous example were normal and the tolerances, t , were

¹⁰See Chapter 20 for a description of the statistical terminology.

given in terms of standard deviations of the dimension distribution, the standard deviation of the gap \bar{w} would be $t_w = \sqrt{\sum_{\text{all}} t^2}$. However, this assumes a normal distribution

for the individual dimensions, a rare occurrence. To find the distribution of w and/or the probability of observing values of w within certain limits requires a computer simulation in most cases. *Monte Carlo* computer simulations are used to determine the distribution of w by the following approach:

- 1 Generate an instance for each dimension in the problem by selecting the value of each dimension based on its probability distribution.
- 2 Calculate w using the values of the dimensions obtained in step 1.
- 3 Repeat steps 1 and 2 N times to generate the distribution of w . As the number of trials increases, the reliability of the distribution increases.

1-14 Units

In the symbolic units equation for Newton's second law, $F = ma$,

$$F = MLT^{-2} \quad (1-4)$$

F stands for force, M for mass, L for length, and T for time. Units chosen for *any* three of these quantities are called *base* units. The first three having been chosen, the fourth unit is called a *derived* unit. When force, length, and time are chosen as base units, the mass is the derived unit and the system that results is called a *gravitational system of units*. When mass, length, and time are chosen as base units, force is the derived unit and the system that results is called an *absolute system of units*.

In some English-speaking countries, the *U.S. customary foot-pound-second system* (fps) and the *inch-pound-second system* (ips) are the two standard gravitational systems most used by engineers. In the fps system the unit of mass is

$$M = \frac{FT^2}{L} = \frac{(\text{pound-force})(\text{second})^2}{\text{foot}} = \text{lbf} \cdot \text{s}^2/\text{ft} = \text{slug} \quad (1-5)$$

Thus, length, time, and force are the three base units in the fps gravitational system.

The unit of force in the fps system is the pound, more properly the *pound-force*. We shall often abbreviate this unit as lbf; the abbreviation lb is permissible however, since we shall be dealing only with the U.S. customary gravitational system. In some branches of engineering it is useful to represent 1000 lbf as a kilopound and to abbreviate it as kip. *Note:* In Eq. (1-5) the derived unit of mass in the fps gravitational system is the $\text{lbf} \cdot \text{s}^2/\text{ft}$ and is called a *slug*; there is no abbreviation for slug.

The unit of mass in the ips gravitational system is

$$M = \frac{FT^2}{L} = \frac{(\text{pound-force})(\text{second})^2}{\text{inch}} = \text{lbf} \cdot \text{s}^2/\text{in} \quad (1-6)$$

The mass unit $\text{lbf} \cdot \text{s}^2/\text{in}$ has no official name.

The *International System of Units* (SI) is an absolute system. The base units are the meter, the kilogram (for mass), and the second. The unit of force is derived by using Newton's second law and is called the *newton*. The units constituting the newton (N) are

$$F = \frac{ML}{T^2} = \frac{(\text{kilogram})(\text{meter})}{(\text{second})^2} = \text{kg} \cdot \text{m}/\text{s}^2 = \text{N} \quad (1-7)$$

The weight of an object is the force exerted upon it by gravity. Designating the weight as W and the acceleration due to gravity as g , we have

$$W = mg \quad (1-8)$$

In the fps system, standard gravity is $g = 32.1740 \text{ ft/s}^2$. For most cases this is rounded off to 32.2. Thus the weight of a mass of 1 slug in the fps system is

$$W = mg = (1 \text{ slug})(32.2 \text{ ft/s}^2) = 32.2 \text{ lbf}$$

In the ips system, standard gravity is 386.088 or about 386 in/s^2 . Thus, in this system, a unit mass weighs

$$W = (1 \text{ lbf} \cdot \text{s}^2/\text{in})(386 \text{ in/s}^2) = 386 \text{ lbf}$$

With SI units, standard gravity is 9.806 or about 9.81 m/s^2 . Thus, the weight of a 1-kg mass is

$$W = (1 \text{ kg})(9.81 \text{ m/s}^2) = 9.81 \text{ N}$$

A series of names and symbols to form multiples and submultiples of SI units has been established to provide an alternative to the writing of powers of 10. Table A–1 includes these prefixes and symbols.

Numbers having four or more digits are placed in groups of three and separated by a space instead of a comma. However, the space may be omitted for the special case of numbers having four digits. A period is used as a decimal point. These recommendations avoid the confusion caused by certain European countries in which a comma is used as a decimal point, and by the English use of a centered period. Examples of correct and incorrect usage are as follows:

1924 or 1 924 but not 1,924
0.1924 or 0.192 4 but not 0.192,4
192 423.618 50 but not 192,423.61850

The decimal point should always be preceded by a zero for numbers less than unity.

1–15 Calculations and Significant Figures

The discussion in this section applies to real numbers, not integers. The accuracy of a real number depends on the number of significant figures describing the number. Usually, but not always, three or four significant figures are necessary for engineering accuracy. Unless otherwise stated, *no less* than three significant figures should be used in your calculations. The number of significant figures is usually inferred by the number of figures given (except for leading zeros). For example, 706, 3.14, and 0.002 19 are assumed to be numbers with three significant figures. For trailing zeros, a little more clarification is necessary. To display 706 to four significant figures insert a trailing zero and display either 706.0, 7.060×10^2 , or 0.7060×10^3 . Also, consider a number such as 91 600. Scientific notation should be used to clarify the accuracy. For three significant figures express the number as 91.6×10^3 . For four significant figures express it as 91.60×10^3 .

Computers and calculators display calculations to many significant figures. However, you should never report a number of significant figures of a calculation any greater than the smallest number of significant figures of the numbers used for the calculation. Of course, you should use the greatest accuracy possible when performing a calculation. For example, determine the circumference of a solid shaft with a diameter of $d = 0.40 \text{ in}$. The circumference is given by $C = \pi d$. Since d is given with two significant figures, C should be reported with only two significant figures. Now if we used only two significant figures for π our calculator would give $C = 3.1(0.40) = 1.24 \text{ in}$. This rounds off to two significant figures as $C = 1.2 \text{ in}$. However, using $\pi = 3.141 592 654$ as programmed in the calculator, $C = 3.141 592 654(0.40) = 1.256 637 061 \text{ in}$. This rounds off to $C = 1.3 \text{ in}$, which is 8.3 percent higher than the first calculation. Note, however, since d is given

with two significant figures, it is implied that the range of d is 0.40 ± 0.005 . This means that the calculation of C is only accurate to within $\pm 0.005/0.40 = \pm 0.0125 = \pm 1.25\%$. The calculation could also be one in a series of calculations, and rounding each calculation separately may lead to an accumulation of greater inaccuracy. Thus, it is considered good engineering practice to make all calculations to the greatest accuracy possible and report the results within the accuracy of the given input.

1-16 Power Transmission Case Study Specifications

A case study incorporating the many facets of the design process for a power transmission speed reducer will be considered throughout this textbook. The problem will be introduced here with the definition and specification for the product to be designed. Further details and component analysis will be presented in subsequent chapters. Chapter 18 provides an overview of the entire process, focusing on the design sequence, the interaction between the component designs, and other details pertinent to transmission of power. It also contains a complete case study of the power transmission speed reducer introduced here.

Many industrial applications require machinery to be powered by engines or electric motors. The power source usually runs most efficiently at a narrow range of rotational speed. When the application requires power to be delivered at a slower speed than supplied by the motor, a speed reducer is introduced. The speed reducer should transmit the power from the motor to the application with as little energy loss as practical, while reducing the speed and consequently increasing the torque. For example, assume that a company wishes to provide off-the-shelf speed reducers in various capacities and speed ratios to sell to a wide variety of target applications. The marketing team has determined a need for one of these speed reducers to satisfy the following customer requirements.

Design Requirements

- Power to be delivered: 20 hp
- Input speed: 1750 rev/min
- Output speed: 85 rev/min
- Targeted for uniformly loaded applications, such as conveyor belts, blowers, and generators
- Output shaft and input shaft in-line
- Base mounted with 4 bolts
- Continuous operation
- 6-year life, with 8 hours/day, 5 days/wk
- Low maintenance
- Competitive cost
- Nominal operating conditions of industrialized locations
- Input and output shafts standard size for typical couplings

In reality, the company would likely design for a whole range of speed ratios for each power capacity, obtainable by interchanging gear sizes within the same overall design. For simplicity, in this case study only one speed ratio will be considered.

Notice that the list of customer requirements includes some numerical specifics, but also includes some generalized requirements, e.g., low maintenance and competitive cost. These general requirements give some guidance on what needs to be considered in the design process, but are difficult to achieve with any certainty. In order to pin down these nebulous requirements, it is best to further develop the customer requirements into a set of product specifications that are measurable. This task is usually achieved through the work of a team including engineering, marketing, management, and customers. Various tools

may be used (see Footnote 1) to prioritize the requirements, determine suitable metrics to be achieved, and to establish target values for each metric. The goal of this process is to obtain a product specification that identifies precisely what the product must satisfy. The following product specifications provide an appropriate framework for this design task.

Design Specifications

Power to be delivered: 20 hp

Power efficiency: >95%

Steady state input speed: 1750 rev/min

Maximum input speed: 2400 rev/min

Steady-state output speed: 82–88 rev/min

Usually low shock levels, occasional moderate shock

Input and output shaft diameter tolerance: ± 0.001 in

Output shaft and input shaft in-line: concentricity ± 0.005 in, alignment ± 0.001 rad

Maximum allowable loads on input shaft: axial, 50 lbf; transverse, 100 lbf

Maximum allowable loads on output shaft: axial, 50 lbf; transverse, 500 lbf

Base mounted with 4 bolts

Mounting orientation only with base on bottom

100% duty cycle

Maintenance schedule: lubrication check every 2000 hours; change of lubrication every 8000 hours of operation; gears and bearing life >12,000 hours;

infinite shaft life; gears, bearings, and shafts replaceable

Access to check, drain, and refill lubrication without disassembly or opening of gasketed joints.

Manufacturing cost per unit: <\$300

Production: 10,000 units per year

Operating temperature range: -10° to 120°F

Sealed against water and dust from typical weather

Noise: <85 dB from 1 meter

PROBLEMS

- 1-1** Select a mechanical component from Part 3 of this book (roller bearings, springs, etc.), go to your university's library or the appropriate internet website, and, using the *Thomas Register of American Manufacturers*, report on the information obtained on five manufacturers or suppliers.
- 1-2** Select a mechanical component from Part 3 of this book (roller bearings, springs, etc.), go to the Internet, and, using a search engine, report on the information obtained on five manufacturers or suppliers.
- 1-3** Select an organization listed in Sec. 1-6, go to the Internet, and list what information is available on the organization.
- 1-4** Go to the Internet and connect to the NSPE website (www.nspe.org). Read the full version of the NSPE Code of Ethics for Engineers and briefly discuss your reading.
- 1-5** Highway tunnel traffic (two parallel lanes in the same direction) experience indicates the average spacing between vehicles increases with speed. Data from a New York tunnel show that between 15 and 35 mi/h, the space x between vehicles (in miles) is $x = 0.324/(42.1 - v)$ where v is the vehicle's speed in miles per hour.
- (a) Ignoring the length of individual vehicles, what speed will give the tunnel the largest volume in vehicles per hour?

- (b) Does including the length of the vehicles cut the tunnel capacity prediction significantly?
Assume the average vehicle length is 10 ft.
- (c) For part (b), does the optimal speed change much?

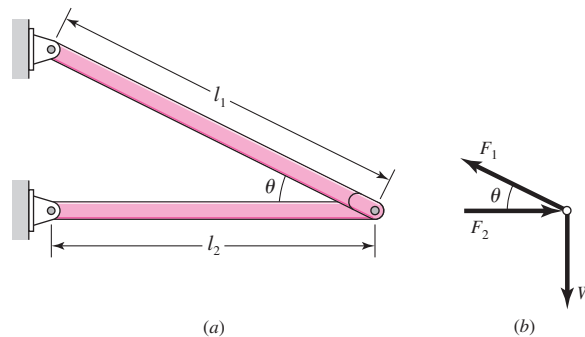
1-6

The engineering designer must create (invent) the concept and connectivity of the elements that constitute a design, and not lose sight of the need to develop ideas with optimality in mind. A useful design attribute can be cost, which can be related to the amount of material used (volume or weight). When you think about it, the weight is a function of the geometry and density. When the design is solidified, finding the weight is a straightforward, sometimes tedious task. The figure depicts a simple bracket frame that has supports that project from a wall column. The bracket supports a chain-fall hoist. Pinned joints are used to avoid bending. The cost of a link can be approximated by $\$ = \phi Al\gamma$, where ϕ is the cost of the link per unit weight, A is the cross-sectional area of the prismatic link, l is the pin-to-pin link length, and γ is the specific weight of the material used. To be sure, this is approximate because no decisions have been made concerning the geometric form of the links or their fittings. By investigating cost now in this approximate way, one can detect whether a particular set of proportions of the bracket (indexed by angle θ) is advantageous. Is there a preferable angle θ ? Show that the cost can be expressed as

$$\$ = \frac{\gamma \phi W l_2}{S} \left(\frac{1 + \cos^2 \theta}{\sin \theta \cos \theta} \right)$$

where W is the weight of the hoist and load, and S is the allowable tensile or compressive stress in the link material (assume $S = |F_i/A|$ and no column buckling action). What is the desirable angle θ corresponding to the minimal cost?

Problem 1-6
(a) A chain-hoist bracket frame.
(b) Free body of pin.



1-7

When one knows the true values x_1 and x_2 and has approximations X_1 and X_2 at hand, one can see where errors may arise. By viewing error as something to be added to an approximation to attain a true value, it follows that the error e_i , is related to X_i , and x_i as $x_i = X_i + e_i$

- (a) Show that the error in a sum $X_1 + X_2$ is

$$(x_1 + x_2) - (X_1 + X_2) = e_1 + e_2$$

- (b) Show that the error in a difference $X_1 - X_2$ is

$$(x_1 - x_2) - (X_1 - X_2) = e_1 - e_2$$

- (c) Show that the error in a product $X_1 X_2$ is

$$x_1 x_2 - X_1 X_2 = X_1 X_2 \left(\frac{e_1}{X_1} + \frac{e_2}{X_2} \right)$$

- (d) Show that in a quotient X_1/X_2 the error is

$$\frac{x_1}{x_2} - \frac{X_1}{X_2} = \frac{X_1}{X_2} \left(\frac{e_1}{X_1} - \frac{e_2}{X_2} \right)$$

- 1-8** Use the true values $x_1 = \sqrt{5}$ and $x_2 = \sqrt{6}$
- Demonstrate the correctness of the error equation from Prob. 1-7 for addition if three correct digits are used for X_1 and X_2 .
 - Demonstrate the correctness of the error equation for addition using three-digit significant numbers for X_1 and X_2 .
- 1-9** Convert the following to appropriate SI units:
- A stress of 20 000 psi.
 - A force of 350 lbf.
 - A moment of 1200 lbf · in.
 - An area of 2.4 in².
 - A second moment of area of 17.4 in⁴.
 - An area of 3.6 mi².
 - A modulus of elasticity of 21 Mpsi.
 - A speed of 45 mi/h.
 - A volume of 60 in³.
- 1-10** Convert the following to appropriate ips units:
- A length of 1.5 m.
 - A stress of 600 MPa.
 - A pressure of 160 kPa.
 - A section modulus of 1.84 (10⁵) mm³.
 - A unit weight of 38.1 N/m.
 - A deflection of 0.05 mm.
 - A velocity of 6.12 m/s.
 - A unit strain of 0.0021 m/m.
 - A volume of 30 L.
- 1-11** Generally, final design results are rounded to or fixed to three digits because the given data cannot justify a greater display. In addition, prefixes should be selected so as to limit number strings to no more than four digits to the left of the decimal point. Using these rules, as well as those for the choice of prefixes, solve the following relations:
- $\sigma = M/Z$, where $M = 200 \text{ N} \cdot \text{m}$ and $Z = 15.3 \times 10^3 \text{ mm}^3$.
 - $\sigma = F/A$, where $F = 42 \text{ kN}$ and $A = 600 \text{ mm}^2$.
 - $y = Fl^3/3EI$, where $F = 1200 \text{ N}$, $l = 800 \text{ mm}$, $E = 207 \text{ GPa}$, and $I = 64 \times 10^3 \text{ mm}^4$.
 - $\theta = Tl/GJ$, where $J = \pi d^4/32$, $T = 1100 \text{ N} \cdot \text{m}$, $l = 250 \text{ mm}$, $G = 79.3 \text{ GPa}$, and $d = 25 \text{ mm}$. Convert results to degrees of angle.
- 1-12** Repeat Prob. 1-11 for the following:
- $\sigma = F/wt$, where $F = 600 \text{ N}$, $w = 20 \text{ mm}$, and $t = 6 \text{ mm}$.
 - $I = bh^3/12$, where $b = 8 \text{ mm}$ and $h = 24 \text{ mm}$.
 - $I = \pi d^4/64$, where $d = 32 \text{ mm}$.
 - $\tau = 16T/\pi d^3$, where $T = 16 \text{ N} \cdot \text{m}$ and $d = 25 \text{ mm}$.
- 1-13** Repeat Prob. 1-11 for:
- $\tau = F/A$, where $A = \pi d^2/4$, $F = 120 \text{ kN}$, and $d = 20 \text{ mm}$.
 - $\sigma = 32 Fa/\pi d^3$, where $F = 800 \text{ N}$, $a = 800 \text{ mm}$, and $d = 32 \text{ mm}$.
 - $Z = (\pi/32d)(d^4 - d_i^4)$ for $d = 36 \text{ mm}$ and $d_i = 26 \text{ mm}$.
 - $k = (d^4 G)/(8D^3 N)$, where $d = 1.6 \text{ mm}$, $G = 79.3 \text{ GPa}$, $D = 19.2 \text{ mm}$, and $N = 32$ (a dimensionless number).

2

Materials

Chapter Outline

2-1	Material Strength and Stiffness	28
2-2	The Statistical Significance of Material Properties	32
2-3	Strength and Cold Work	33
2-4	Hardness	36
2-5	Impact Properties	37
2-6	Temperature Effects	39
2-7	Numbering Systems	40
2-8	Sand Casting	41
2-9	Shell Molding	42
2-10	Investment Casting	42
2-11	Powder-Metallurgy Process	42
2-12	Hot-Working Processes	43
2-13	Cold-Working Processes	44
2-14	The Heat Treatment of Steel	44
2-15	Alloy Steels	47
2-16	Corrosion-Resistant Steels	48
2-17	Casting Materials	49
2-18	Nonferrous Metals	51
2-19	Plastics	54
2-20	Composite Materials	55
2-21	Materials Selection	56

The selection of a material for a machine part or a structural member is one of the most important decisions the designer is called on to make. The decision is usually made before the dimensions of the part are established. After choosing the process of creating the desired geometry and the material (the two cannot be divorced), the designer can proportion the member so that loss of function can be avoided or the chance of loss of function can be held to an acceptable risk.

In Chaps. 3 and 4, methods for estimating stresses and deflections of machine members are presented. These estimates are based on the properties of the material from which the member will be made. For deflections and stability evaluations, for example, the elastic (stiffness) properties of the material are required, and evaluations of stress at a critical location in a machine member require a comparison with the strength of the material at that location in the geometry and condition of use. This strength is a material property found by testing and is adjusted to the geometry and condition of use as necessary.

As important as stress and deflection are in the design of mechanical parts, the selection of a material is not always based on these factors. Many parts carry no loads on them whatever. Parts may be designed merely to fill up space or for aesthetic qualities. Members must frequently be designed to also resist corrosion. Sometimes temperature effects are more important in design than stress and strain. So many other factors besides stress and strain may govern the design of parts that the designer must have the versatility that comes only with a broad background in materials and processes.

2-1 Material Strength and Stiffness

The standard tensile test is used to obtain a variety of material characteristics and strengths that are used in design. Figure 2-1 illustrates a typical tension-test specimen and its characteristic dimensions.¹ The original diameter d_0 and the gauge length l_0 , used to measure the deflections, are recorded before the test is begun. The specimen is then mounted in the test machine and slowly loaded in tension while the load P and deflection are observed. The load is converted to stress by the calculation

$$\sigma = \frac{P}{A_0} \quad (2-1)$$

where $A_0 = \frac{1}{4}\pi d_0^2$ is the original area of the specimen.

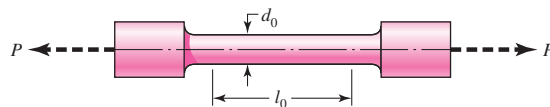


Figure 2-1

A typical tension-test specimen. Some of the standard dimensions used for d_0 are 2.5, 6.25, and 12.5 mm and 0.505 in, but other sections and sizes are in use. Common gauge lengths l_0 used are 10, 25, and 50 mm and 1 and 2 in.

¹See ASTM standards E8 and E-8 m for standard dimensions.

The deflection, or extension of the gage length, is given by $l - l_0$ where l is the gauge length corresponding to the load P . The normal strain is calculated from

$$\epsilon = \frac{l - l_0}{l_0} \quad (2-2)$$

At the conclusion of, or during, the test, the results are plotted as a *stress-strain diagram*. Figure 2–2 depicts typical stress-strain diagrams for ductile and brittle materials. Ductile materials deform much more than brittle materials.

Point pl in Fig. 2–2a is called the *proportional limit*. This is the point at which the curve first begins to deviate from a straight line. No permanent set will be observable in the specimen if the load is removed at this point. In the linear range, the uniaxial stress-strain relation is given by *Hooke's law* as

$$\sigma = E\epsilon \quad (2-3)$$

where the constant of proportionality E , the slope of the linear part of the stress-strain curve, is called *Young's modulus* or the *modulus of elasticity*. E is a measure of the stiffness of a material, and since strain is dimensionless, the units of E are the same as stress. Steel, for example, has a modulus of elasticity of about 30 Mpsi (207 GPa) *regardless of heat treatment, carbon content, or alloying*. Stainless steel is about 27.5 Mpsi (190 GPa).

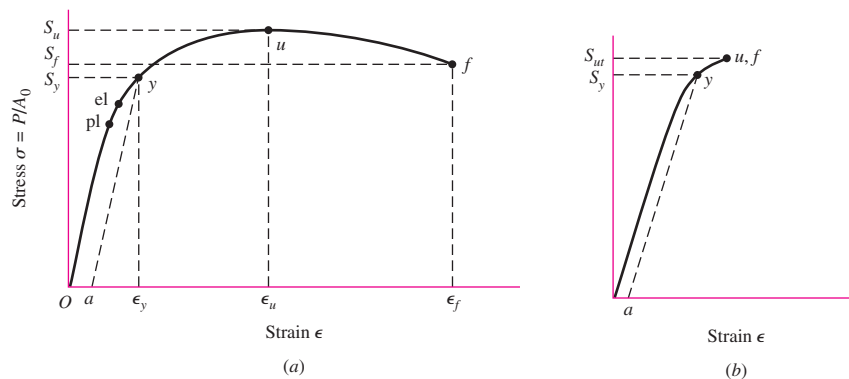
Point el in Fig. 2–2 is called the *elastic limit*. If the specimen is loaded beyond this point, the deformation is said to be plastic and the material will take on a permanent set when the load is removed. Between pl and el the diagram is not a perfectly straight line, even though the specimen is elastic.

During the tension test, many materials reach a point at which the strain begins to increase very rapidly without a corresponding increase in stress. This point is called the *yield point*. Not all materials have an obvious yield point, especially for brittle materials. For this reason, *yield strength* S_y is often defined by an *offset method* as shown in Fig. 2–2, where line ay is drawn at slope E . Point a corresponds to a definite or stated amount of permanent set, usually 0.2 percent of the original gauge length ($\epsilon = 0.002$), although 0.01, 0.1, and 0.5 percent are sometimes used.

The *ultimate*, or *tensile*, *strength* S_u or S_{ut} corresponds to point u in Fig. 2–2 and is the maximum stress reached on the stress-strain diagram.² As shown in Fig. 2–2a,

Figure 2-2

Stress-strain diagram obtained from the standard tensile test (a) Ductile material; (b) brittle material. pl marks the proportional limit; el, the elastic limit; y , the offset-yield strength as defined by offset strain a ; u , the maximum or ultimate strength; and f , the fracture strength.



²Usage varies. For a long time engineers used the term *ultimate strength*, hence the subscript u in S_u or S_{ut} . However, in material science and metallurgy the term *tensile strength* is used.

some materials exhibit a downward trend after the maximum stress is reached and fracture at point f on the diagram. Others, such as some of the cast irons and high-strength steels, fracture while the stress-strain trace is still rising, as shown in Fig. 2–2*b*, where points u and f are identical.

As noted in Sec. 1–9, *strength*, as used in this book, is a built-in property of a material, or of a mechanical element, because of the selection of a particular material or process or both. The strength of a connecting rod at the critical location in the geometry and condition of use, for example, is the same no matter whether it is already an element in an operating machine or whether it is lying on a workbench awaiting assembly with other parts. On the other hand, *stress* is something that occurs in a part, usually as a result of its being assembled into a machine and loaded. However, stresses may be built into a part by processing or handling. For example, shot peening produces a compressive *stress* in the outer surface of a part, and also improves the fatigue strength of the part. Thus, in this book we will be very careful in distinguishing between *strength*, designated by S , and *stress*, designated by σ or τ .

The diagrams in Fig. 2–2 are called *engineering stress-strain diagrams* because the stresses and strains calculated in Eqs. (2–1) and (2–2) are not *true* values. The stress calculated in Eq. (2–1) is based on the original area *before* the load is applied. In reality, as the load is applied the area reduces so that the *actual* or *true stress* is larger than the *engineering stress*. To obtain the true stress for the diagram the load and the cross-sectional area must be measured simultaneously during the test. Figure 2–2*a* represents a ductile material where the stress appears to decrease from points u to f . Typically, beyond point u the specimen begins to “neck” at a location of weakness where the area reduces dramatically, as shown in Fig. 2–3. For this reason, the true stress is much higher than the engineering stress at the necked section.

The engineering strain given by Eq. (2–2) is based on net change in length from the *original* length. In plotting the *true stress-strain diagram*, it is customary to use a term called *true strain* or, sometimes, *logarithmic strain*. True strain is the sum of the incremental elongations divided by the *current* gauge length at load P , or

$$\varepsilon = \int_{l_0}^l \frac{dl}{l} = \ln \frac{l}{l_0} \quad (2-4)$$

where the symbol ε is used to represent true strain. The most important characteristic of a true stress-strain diagram (Fig. 2–4) is that the true stress continually increases all the way to fracture. Thus, as shown in Fig. 2–4, the true fracture stress σ_f is greater than the true ultimate stress σ_u . Contrast this with Fig. 2–2*a*, where the engineering fracture strength S_f is less than the engineering ultimate strength S_u .

Compression tests are more difficult to conduct, and the geometry of the test specimens differs from the geometry of those used in tension tests. The reason for this is that the specimen may buckle during testing or it may be difficult to distribute the stresses evenly. Other difficulties occur because ductile materials will bulge after yielding. However, the results can be plotted on a stress-strain diagram also, and the same strength definitions can be applied as used in tensile testing. For most ductile materials the compressive strengths are about the same as the tensile strengths. When substantial differences occur between tensile and compressive strengths, however, as is the case with

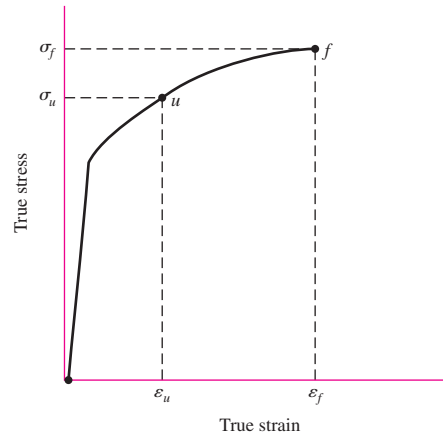
Figure 2–3

Tension specimen after necking.



Figure 2-4

True stress-strain diagram plotted in Cartesian coordinates.



the cast irons, the tensile and compressive strengths should be stated separately, S_{ut} , S_{uc} , where S_{uc} is reported as a *positive* quantity.

Torsional strengths are found by twisting solid circular bars and recording the torque and the twist angle. The results are then plotted as a *torque-twist diagram*. The shear stresses in the specimen are linear with respect to radial location, being zero at the center of the specimen and maximum at the outer radius r (see Chap. 3). The maximum shear stress τ_{\max} is related to the angle of twist θ by

$$\tau_{\max} = \frac{Gr}{l_0}\theta \quad (2-5)$$

where θ is in radians, r is the radius of the specimen, l_0 is the gauge length, and G is the material stiffness property called the *shear modulus* or the *modulus of rigidity*. The maximum shear stress is also related to the applied torque T as

$$\tau_{\max} = \frac{Tr}{J} \quad (2-6)$$

where $J = \frac{1}{2}\pi r^4$ is the polar second moment of area of the cross section.

The torque-twist diagram will be similar to Fig. 2-2, and, using Eqs. (2-5) and (2-6), the modulus of rigidity can be found as well as the elastic limit and the *torsional yield strength* S_{sy} . The maximum point on a torque-twist diagram, corresponding to point u on Fig. 2-2, is T_u . The equation

$$S_{su} = \frac{T_u r}{J} \quad (2-7)$$

defines the *modulus of rupture* for the torsion test. Note that it is incorrect to call S_{su} the ultimate torsional strength, as the outermost region of the bar is in a plastic state at the torque T_u and the stress distribution is no longer linear.

All of the stresses and strengths defined by the stress-strain diagram of Fig. 2-2 and similar diagrams are specifically known as *engineering stresses* and *strengths* or *nominal stresses* and *strengths*. These are the values normally used in all engineering design calculations. The adjectives *engineering* and *nominal* are used here to emphasize that the stresses are computed by using the *original* or *unstressed cross-sectional area* of the specimen. In this book we shall use these modifiers only when we specifically wish to call attention to this distinction.

2–2 The Statistical Significance of Material Properties

There is some subtlety in the ideas presented in the previous section that should be pondered carefully before continuing. Figure 2–2 depicts the result of a *single* tension test (*one* specimen, now fractured). It is common for engineers to consider these important *stress* values (at points *pl*, *el*, *y*, *u*, and *f*) as properties and to denote them as strengths with a special notation, uppercase *S*, in lieu of lowercase sigma σ , with subscripts added: S_{pl} for proportional limit, S_y for yield strength, S_u for ultimate tensile strength (S_{ut} or S_{uc} , if tensile or compressive sense is important).

If there were 1000 nominally identical specimens, the values of strength obtained would be distributed between some minimum and maximum values. It follows that the description of strength, a material property, is distributional and thus is statistical in nature. Chapter 20 provides more detail on statistical considerations in design. Here we will simply describe the results of one example, Ex. 20-4. Consider the following table, which is a histogram report containing the maximum stresses of 1000 tensile tests on a 1020 steel from a single heat. Here we are seeking the ultimate tensile strength S_{ut} . The class frequency is the number of occurrences within a 1 kpsi range given by the class midpoint. Thus, 18 maximum stress values occurred in the range of 57 to 58 kpsi.

Class Frequency f_i	2	18	23	31	83	109	138	151	139	130	82	49	28	11	4	2
Class Midpoint x_i , kpsi	56.5	57.5	58.5	59.5	60.5	61.5	62.5	63.5	64.5	65.5	66.5	67.5	68.5	69.5	70.5	71.5

The *probability density* is defined as the number of occurrences divided by the total sample number. The bar chart in Fig. 2–5 depicts the histogram of the probability density. If the data is in the form of a *Gaussian* or *normal distribution*, the *probability density function* determined in Ex. 20-4 is

$$f(x) = \frac{1}{2.594\sqrt{2\pi}} \exp \left[-\frac{1}{2} \left(\frac{x - 63.62}{2.594} \right)^2 \right]$$

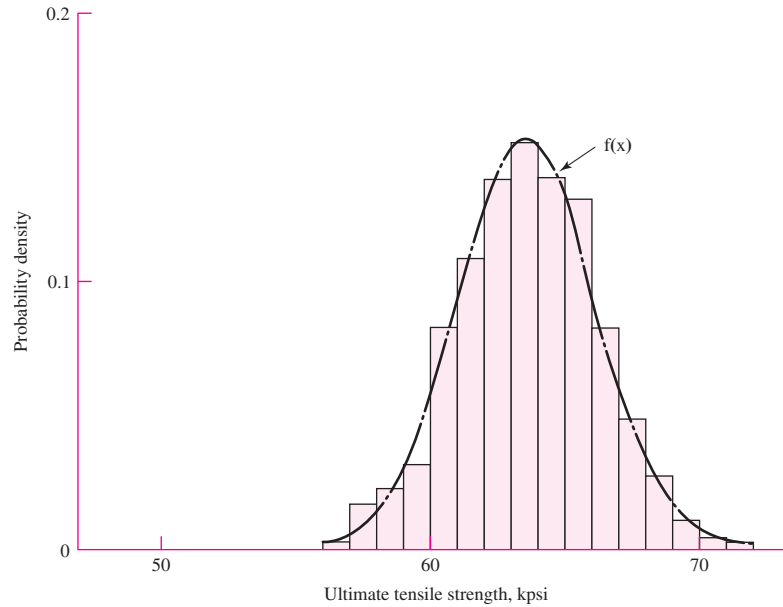
where the mean stress is 63.62 kpsi and the standard deviation is 2.594 kpsi. A plot of $f(x)$ is included in Fig. 2–5. The description of the strength S_{ut} is then expressed in terms of its statistical parameters and its distribution type. In this case $S_{ut} = N(63.62, 2.594)$ kpsi.

Note that the test program has described 1020 property S_{ut} , for only one heat of one supplier. Testing is an involved and expensive process. Tables of properties are often prepared to be helpful to other persons. A statistical quantity is described by its mean, standard deviation, and distribution type. Many tables display a single number, which is often the mean, minimum, or some percentile, such as the 99th percentile. Always read the footnotes to the table. If no qualification is made in a single-entry table, the table is subject to serious doubt.

Since it is no surprise that useful descriptions of a property are statistical in nature, engineers, when ordering property tests, should couch the instructions so the data generated are enough for them to observe the statistical parameters and to identify the distributional characteristic. The tensile test program on 1000 specimens of 1020 steel is a large one. If you were faced with putting something in a table of ultimate tensile strengths and constrained to a single number, what would it be and just how would your footnote read?

Figure 2-5

Histogram for 1000 tensile tests on a 1020 steel from a single heat.



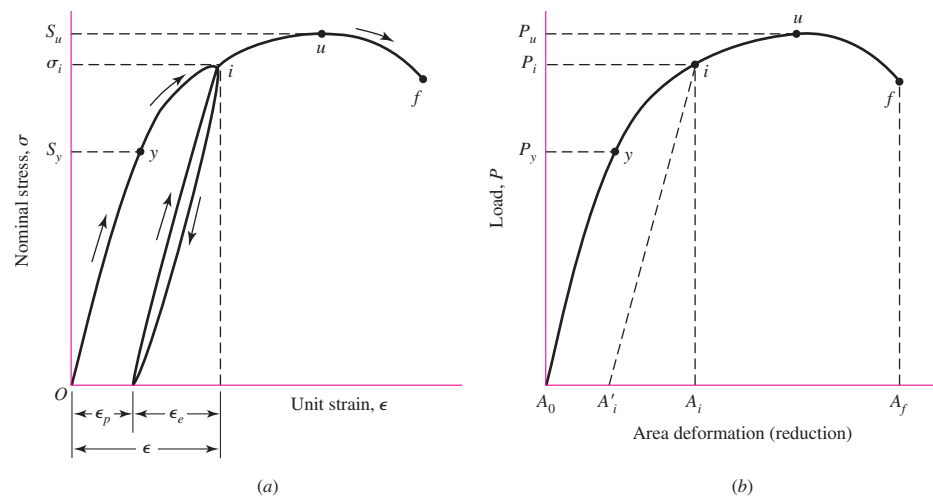
2-3 Strength and Cold Work

Cold working is the process of plastic straining below the recrystallization temperature in the plastic region of the stress-strain diagram. Materials can be deformed plastically by the application of heat, as in blacksmithing or hot rolling, but the resulting mechanical properties are quite different from those obtained by cold working. The purpose of this section is to explain what happens to the significant mechanical properties of a material when that material is cold-worked.

Consider the stress-strain diagram of Fig. 2-6*a*. Here a material has been stressed beyond the yield strength at y to some point i , in the plastic region, and then the load removed. At this point the material has a permanent plastic deformation ϵ_p . If the load corresponding to point i is now reapplied, the material will be elastically deformed by

Figure 2-6

(*a*) Stress-strain diagram showing unloading and reloading at point i in the plastic region; (*b*) analogous load-deformation diagram.



the amount ϵ_e . Thus at point i the total unit strain consists of the two components ϵ_p and ϵ_e and is given by the equation

$$\epsilon = \epsilon_p + \epsilon_e \quad (a)$$

This material can be unloaded and reloaded any number of times from and to point i , and it is found that the action always occurs along the straight line that is approximately parallel to the initial elastic line Oy . Thus

$$\epsilon_e = \frac{\sigma_i}{E} \quad (b)$$

The material now has a higher yield point, is less ductile as a result of a reduction in strain capacity, and is said to be *strain-hardened*. If the process is continued, increasing ϵ_p , the material can become brittle and exhibit sudden fracture.

It is possible to construct a similar diagram, as in Fig. 2–6*b*, where the abscissa is the area deformation and the ordinate is the applied load. The *reduction in area* corresponding to the load P_f , at fracture, is defined as

$$R = \frac{A_0 - A_f}{A_0} = 1 - \frac{A_f}{A_0} \quad (2-8)$$

where A_0 is the original area. The quantity R in Eq. (2–8) is usually expressed in percent and tabulated in lists of mechanical properties as a measure of *ductility*. See Appendix Table A–20, for example. Ductility is an important property because it measures the ability of a material to absorb overloads and to be cold-worked. Thus such operations as bending, drawing, heading, and stretch forming are metal-processing operations that require ductile materials.

Figure 2–6*b* can also be used to define the quantity of cold work. The *cold-work factor* W is defined as

$$W = \frac{A_0 - A'_i}{A_0} \approx \frac{A_0 - A_i}{A_0} \quad (2-9)$$

where A'_i corresponds to the area after the load P_i has been released. The approximation in Eq. (2–9) results because of the difficulty of measuring the small diametral changes in the elastic region. If the amount of cold work is known, then Eq. (2–9) can be solved for the area A'_i . The result is

$$A'_i = A_0(1 - W) \quad (2-10)$$

Cold working a material produces a new set of values for the strengths, as can be seen from stress-strain diagrams. Datsko³ describes the plastic region of the true stress–true strain diagram by the equation

$$\sigma = \sigma_0 \epsilon^m \quad (2-11)$$

³Joseph Datsko, “Solid Materials,” Chap. 32 in Joseph E. Shigley, Charles R. Mischke, and Thomas H. Brown, Jr. (eds.), *Standard Handbook of Machine Design*, 3rd ed., McGraw-Hill, New York, 2004. See also Joseph Datsko, “New Look at Material Strength,” *Machine Design*, vol. 58, no. 3, Feb. 6, 1986, pp. 81–85.

where σ = true stress
 σ_0 = a strength coefficient, or strain-strengthening coefficient
 ε = true plastic strain
 m = strain-strengthening exponent

It can be shown⁴ that

$$m = \varepsilon_u \quad (2-12)$$

provided that the load-deformation curve exhibits a stationary point (a place of zero slope).

Difficulties arise when using the gauge length to evaluate the true strain in the plastic range, since necking causes the strain to be nonuniform. A more satisfactory relation can be obtained by using the area at the neck. Assuming that the change in volume of the material is small, $Al = A_0 l_0$. Thus, $l/l_0 = A_0/A$, and the true strain is given by

$$\varepsilon = \ln \frac{l}{l_0} = \ln \frac{A_0}{A} \quad (2-13)$$

Returning to Fig. 2-6*b*, if point i is to the left of point u , that is, $P_i < P_u$, then the new yield strength is

$$S'_y = \frac{P_i}{A'_i} = \sigma_0 \varepsilon_i^m \quad P_i \leq P_u \quad (2-14)$$

Because of the reduced area, that is, because $A'_i < A_0$, the ultimate strength also changes, and is

$$S'_u = \frac{P_u}{A'_i} \quad (c)$$

Since $P_u = S_u A_0$, we find, with Eq. (2-10), that

$$S'_u = \frac{S_u A_0}{A_0(1 - W)} = \frac{S_u}{1 - W} \quad \varepsilon_i \leq \varepsilon_u \quad (2-15)$$

which is valid only when point i is to the left of point u .

For points to the right of u , the yield strength is approaching the ultimate strength, and, with small loss in accuracy,

$$S'_u \doteq S'_y \doteq \sigma_0 \varepsilon_i^m \quad \varepsilon_i \leq \varepsilon_u \quad (2-16)$$

A little thought will reveal that a bar will have the same ultimate load in tension after being strain-strengthened in tension as it had before. The new strength is of interest to us not because the static ultimate load increases, but—since fatigue strengths are correlated with the local ultimate strengths—because the fatigue strength improves. Also the yield strength increases, giving a larger range of sustainable *elastic* loading.

⁴See Sec. 5-2, J. E. Shigley and C. R. Mischke, *Mechanical Engineering Design*, 6th ed., McGraw-Hill, New York, 2001.

EXAMPLE 2-1

An annealed AISI 1018 steel (see Table A-22) has $S_y = 32.0$ kpsi, $S_u = 49.5$ kpsi, $\sigma_f = 91.1$ kpsi, $\sigma_0 = 90$ kpsi, $m = 0.25$, and $\varepsilon_f = 1.05$ in/in. Find the new values of the strengths if the material is given 15 percent cold work.

Solution From Eq. (2-12), we find the true strain corresponding to the ultimate strength to be

$$\varepsilon_u = m = 0.25$$

The ratio A_0/A_i is, from Eq. (2-9),

$$\frac{A_0}{A_i} = \frac{1}{1 - W} = \frac{1}{1 - 0.15} = 1.176$$

The true strain corresponding to 15 percent cold work is obtained from Eq. (2-13). Thus

$$\varepsilon_i = \ln \frac{A_0}{A_i} = \ln 1.176 = 0.1625$$

Since $\varepsilon_i < \varepsilon_u$, Eqs. (2-14) and (2-15) apply. Therefore,

Answer
$$S'_y = \sigma_0 \varepsilon_i^m = 90(0.1625)^{0.25} = 57.1 \text{ kpsi}$$

Answer
$$S'_u = \frac{S_u}{1 - W} = \frac{49.5}{1 - 0.15} = 58.2 \text{ kpsi}$$

2-4 Hardness

The resistance of a material to penetration by a pointed tool is called *hardness*. Though there are many hardness-measuring systems, we shall consider here only the two in greatest use.

Rockwell hardness tests are described by ASTM standard hardness method E-18 and measurements are quickly and easily made, they have good reproducibility, and the test machine for them is easy to use. In fact, the hardness number is read directly from a dial. Rockwell hardness scales are designated as A , B , C , . . . , etc. The indenters are described as a diamond, a $\frac{1}{16}$ -in-diameter ball, and a diamond for scales A , B , and C , respectively, where the load applied is either 60, 100, or 150 kg. Thus the Rockwell B scale, designated R_B , uses a 100-kg load and a No. 2 indenter, which is a $\frac{1}{16}$ -in-diameter ball. The Rockwell C scale R_C uses a diamond cone, which is the No. 1 indenter, and a load of 150 kg. Hardness numbers so obtained are relative. Therefore a hardness $R_C = 50$ has meaning only in relation to another hardness number using the same scale.

The *Brinell hardness* is another test in very general use. In testing, the indenting tool through which force is applied is a ball and the hardness number H_B is found as a number equal to the applied load divided by the spherical surface area of the indentation. Thus the units of H_B are the same as those of stress, though they are seldom used. Brinell hardness testing takes more time, since H_B must be computed from the test data. The primary advantage of both methods is that they are nondestructive in most cases. Both are empirically and directly related to the ultimate strength of the

material tested. This means that the strength of parts could, if desired, be tested part by part during manufacture.

For *steels*, the relationship between the minimum ultimate strength and the Brinell hardness number for $200 \leq H_B \leq 450$ is found to be

$$S_u = \begin{cases} 0.495H_B & \text{kpsi} \\ 3.41H_B & \text{MPa} \end{cases} \quad (2-17)$$

Similar relationships for *cast iron* can be derived from data supplied by Krause.⁵ Data from 72 tests of gray iron produced by one foundry and poured in two sizes of test bars are reported in graph form. The minimum strength, as defined by the ASTM, is found from these data to be

$$S_u = \begin{cases} 0.23H_B - 12.5 & \text{kpsi} \\ 1.58H_B - 86 & \text{MPa} \end{cases} \quad (2-18)$$

Walton⁶ shows a chart from which the SAE minimum strength can be obtained. The result is

$$S_u = 0.2375H_B - 16 \text{ kpsi} \quad (2-19)$$

which is even more conservative than the values obtained from Eq. (2-18).

EXAMPLE 2-2

It is necessary to ensure that a certain part supplied by a foundry always meets or exceeds ASTM No. 20 specifications for cast iron (see Table A-24). What hardness should be specified?

Solution From Eq. (2-18), with $(S_u)_{\min} = 20$ kpsi, we have

Answer

$$H_B = \frac{S_u + 12.5}{0.23} = \frac{20 + 12.5}{0.23} = 141$$

If the foundry can control the hardness within 20 points, routinely, then specify $145 < H_B < 165$. This imposes no hardship on the foundry and assures the designer that ASTM grade 20 will always be supplied at a predictable cost.

2-5 Impact Properties

An external force applied to a structure or part is called an *impact load* if the time of application is less than one-third the lowest natural period of vibration of the part or structure. Otherwise it is called simply a *static load*.

⁵D. E. Krause, "Gray Iron—A Unique Engineering Material," ASTM Special Publication 455, 1969, pp. 3–29, as reported in Charles F. Walton (ed.), *Iron Castings Handbook*, Iron Founders Society, Inc., Cleveland, 1971, pp. 204, 205.

⁶Ibid.

The *Charpy* (commonly used) and *Izod* (rarely used) *notched-bar tests* utilize bars of specified geometries to determine brittleness and impact strength. These tests are helpful in comparing several materials and in the determination of low-temperature brittleness. In both tests the specimen is struck by a pendulum released from a fixed height, and the energy absorbed by the specimen, called the *impact value*, can be computed from the height of swing after fracture, but is read from a dial that essentially “computes” the result.

The effect of temperature on impact values is shown in Fig. 2–7 for a material showing a ductile-brittle transition. Not all materials show this transition. Notice the narrow region of critical temperatures where the impact value increases very rapidly. In the low-temperature region the fracture appears as a brittle, shattering type, whereas the appearance is a tough, tearing type above the critical-temperature region. The critical temperature seems to be dependent on both the material and the geometry of the notch. For this reason designers should not rely too heavily on the results of notched-bar tests.

The average strain rate used in obtaining the stress-strain diagram is about $0.001 \text{ in}/(\text{in} \cdot \text{s})$ or less. When the strain rate is increased, as it is under impact conditions, the strengths increase, as shown in Fig. 2–8. In fact, at very high strain rates the yield strength seems to approach the ultimate strength as a limit. But note that the curves show little change in the elongation. This means that the ductility remains about the same. Also, in view of the sharp increase in yield strength, a mild steel could be expected to behave elastically throughout practically its entire strength range under impact conditions.

Figure 2-7

A mean trace shows the effect of temperature on impact values. The result of interest is the brittle-ductile transition temperature, often defined as the temperature at which the mean trace passes through the $1.5 \text{ ft} \cdot \text{lb}$ level. The critical temperature is dependent on the geometry of the notch, which is why the Charpy V notch is closely defined.

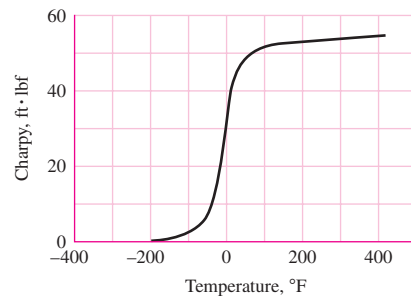
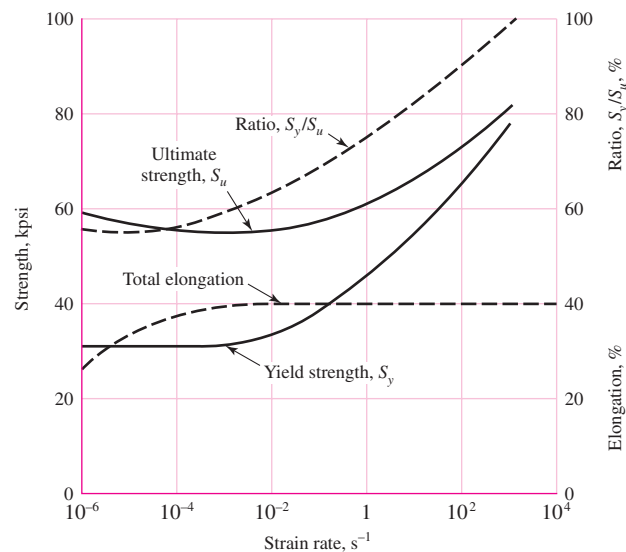


Figure 2-8

Influence of strain rate on tensile properties.



The Charpy and Izod tests really provide toughness data under dynamic, rather than static, conditions. It may well be that impact data obtained from these tests are as dependent on the notch geometry as they are on the strain rate. For these reasons it may be better to use the concepts of notch sensitivity, fracture toughness, and fracture mechanics, discussed in Chaps. 5 and 6, to assess the possibility of cracking or fracture.

2-6 Temperature Effects

Strength and ductility, or brittleness, are properties affected by the temperature of the operating environment.

The effect of temperature on the static properties of steels is typified by the strength versus temperature chart of Fig. 2-9. Note that the tensile strength changes only a small amount until a certain temperature is reached. At that point it falls off rapidly. The yield strength, however, decreases continuously as the environmental temperature is increased. There is a substantial increase in ductility, as might be expected, at the higher temperatures.

Many tests have been made of ferrous metals subjected to constant loads for long periods of time at elevated temperatures. The specimens were found to be permanently deformed during the tests, even though at times the actual stresses were less than the yield strength of the material obtained from short-time tests made at the same temperature. This continuous deformation under load is called *creep*.

One of the most useful tests to have been devised is the long-time creep test under constant load. Figure 2-10 illustrates a curve that is typical of this kind of test. The curve is obtained at a constant stated temperature. A number of tests are usually run simultaneously at different stress intensities. The curve exhibits three distinct regions. In the first stage are included both the elastic and the plastic deformation. This stage shows a decreasing creep rate, which is due to the strain hardening. The second stage shows a constant minimum creep rate caused by the annealing effect. In the third stage the specimen shows a considerable reduction in area, the true stress is increased, and a higher creep eventually leads to fracture.

When the operating temperatures are lower than the transition temperature (Fig. 2-7), the possibility arises that a part could fail by a brittle fracture. This subject will be discussed in Chap. 5.

Figure 2-9

A plot of the results of 145 tests of 21 carbon and alloy steels showing the effect of operating temperature on the yield strength S_y and the ultimate strength S_{ut} . The ordinate is the ratio of the strength at the operating temperature to the strength at room temperature. The standard deviations were $0.0442 \leq \hat{\sigma}_{S_y} \leq 0.152$ for S_y and $0.099 \leq \hat{\sigma}_{S_{ut}} \leq 0.11$ for S_{ut} . (Data source: E. A. Brandes (ed.), *Smithells Metal Reference Book*, 6th ed., Butterworth, London, 1983 pp. 22-128 to 22-131.)

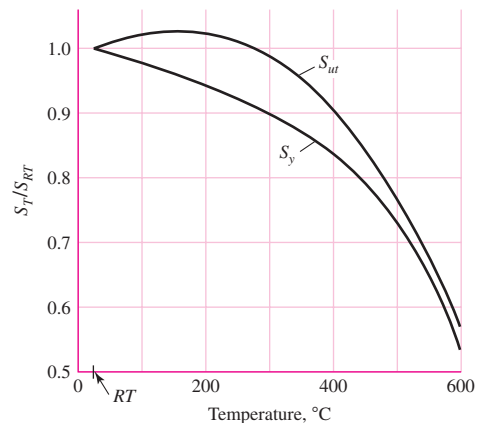
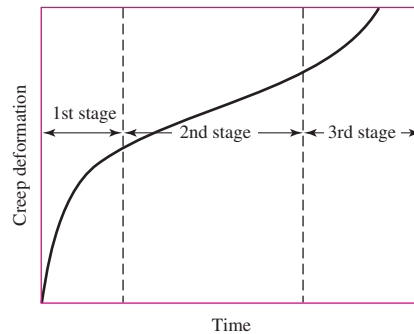


Figure 2-10

Creep-time curve.



Of course, heat treatment, as will be shown, is used to make substantial changes in the mechanical properties of a material.

Heating due to electric and gas welding also changes the mechanical properties. Such changes may be due to clamping during the welding process, as well as heating; the resulting stresses then remain when the parts have cooled and the clamps have been removed. Hardness tests can be used to learn whether the strength has been changed by welding, but such tests will not reveal the presence of residual stresses.

2-7 Numbering Systems

The Society of Automotive Engineers (SAE) was the first to recognize the need, and to adopt a system, for the numbering of steels. Later the American Iron and Steel Institute (AISI) adopted a similar system. In 1975 the SAE published the Unified Numbering System for Metals and Alloys (UNS); this system also contains cross-reference numbers for other material specifications.⁷ The UNS uses a letter prefix to designate the material, as, for example, G for the carbon and alloy steels, A for the aluminum alloys, C for the copper-base alloys, and S for the stainless or corrosion-resistant steels. For some materials, not enough agreement has as yet developed in the industry to warrant the establishment of a designation.

For the steels, the first two numbers following the letter prefix indicate the composition, excluding the carbon content. The various compositions used are as follows:

G10	Plain carbon	G46	Nickel-molybdenum
G11	Free-cutting carbon steel with more sulfur or phosphorus	G48	Nickel-molybdenum
G13	Manganese	G50	Chromium
G23	Nickel	G51	Chromium
G25	Nickel	G52	Chromium
G31	Nickel-chromium	G61	Chromium-vanadium
G33	Nickel-chromium	G86	Chromium-nickel-molybdenum
G40	Molybdenum	G87	Chromium-nickel-molybdenum
G41	Chromium-molybdenum	G92	Manganese-silicon
G43	Nickel-chromium-molybdenum	G94	Nickel-chromium-molybdenum

⁷Many of the materials discussed in the balance of this chapter are listed in the Appendix tables. Be sure to review these.

Table 2-1Aluminum Alloy
Designations

Aluminum 99.00% pure and greater	Ax1xxx
Copper alloys	Ax2xxx
Manganese alloys	Ax3xxx
Silicon alloys	Ax4xxx
Magnesium alloys	Ax5xxx
Magnesium-silicon alloys	Ax6xxx
Zinc alloys	Ax7xxx

The second number pair refers to the approximate carbon content. Thus, G10400 is a plain carbon steel with a nominal carbon content of 0.40 percent (0.37 to 0.44 percent). The fifth number following the prefix is used for special situations. For example, the old designation AISI 52100 represents a chromium alloy with about 100 points of carbon. The UNS designation is G52986.

The UNS designations for the stainless steels, prefix S, utilize the older AISI designations for the first three numbers following the prefix. The next two numbers are reserved for special purposes. The first number of the group indicates the approximate composition. Thus 2 is a chromium-nickel-manganese steel, 3 is a chromium-nickel steel, and 4 is a chromium alloy steel. Sometimes stainless steels are referred to by their alloy content. Thus S30200 is often called an 18-8 stainless steel, meaning 18 percent chromium and 8 percent nickel.

The prefix for the aluminum group is the letter A. The first number following the prefix indicates the processing. For example, A9 is a wrought aluminum, while A0 is a casting alloy. The second number designates the main alloy group as shown in Table 2-1. The third number in the group is used to modify the original alloy or to designate the impurity limits. The last two numbers refer to other alloys used with the basic group.

The American Society for Testing and Materials (ASTM) numbering system for cast iron is in widespread use. This system is based on the tensile strength. Thus ASTM A18 speaks of classes; e.g., 30 cast iron has a minimum tensile strength of 30 kpsi. Note from Appendix A-24, however, that the *typical* tensile strength is 31 kpsi. You should be careful to designate which of the two values is used in design and problem work because of the significance of factor of safety.

2-8 Sand Casting

Sand casting is a basic low-cost process, and it lends itself to economical production in large quantities with practically no limit to the size, shape, or complexity of the part produced.

In sand casting, the casting is made by pouring molten metal into sand molds. A pattern, constructed of metal or wood, is used to form the cavity into which the molten metal is poured. Recesses or holes in the casting are produced by sand cores introduced into the mold. The designer should make an effort to visualize the pattern and casting in the mold. In this way the problems of core setting, pattern removal, draft, and solidification can be studied. Castings to be used as test bars of cast iron are cast separately and properties may vary.

Steel castings are the most difficult of all to produce, because steel has the highest melting temperature of all materials normally used for casting. This high temperature aggravates all casting problems.

The following rules will be found quite useful in the design of any sand casting:

- 1 All sections should be designed with a uniform thickness.
- 2 The casting should be designed so as to produce a gradual change from section to section where this is necessary.
- 3 Adjoining sections should be designed with generous fillets or radii.
- 4 A complicated part should be designed as two or more simple castings to be assembled by fasteners or by welding.

Steel, gray iron, brass, bronze, and aluminum are most often used in castings. The minimum wall thickness for any of these materials is about 5 mm, though with particular care, thinner sections can be obtained with some materials.

2-9 Shell Molding

The shell-molding process employs a heated metal pattern, usually made of cast iron, aluminum, or brass, which is placed in a shell-molding machine containing a mixture of dry sand and thermosetting resin. The hot pattern melts the plastic, which, together with the sand, forms a shell about 5 to 10 mm thick around the pattern. The shell is then baked at from 400 to 700°F for a short time while still on the pattern. It is then stripped from the pattern and placed in storage for use in casting.

In the next step the shells are assembled by clamping, bolting, or pasting; they are placed in a backup material, such as steel shot; and the molten metal is poured into the cavity. The thin shell permits the heat to be conducted away so that solidification takes place rapidly. As solidification takes place, the plastic bond is burned and the mold collapses. The permeability of the backup material allows the gases to escape and the casting to air-cool. All this aids in obtaining a fine-grain, stress-free casting.

Shell-mold castings feature a smooth surface, a draft that is quite small, and close tolerances. In general, the rules governing sand casting also apply to shell-mold casting.

2-10 Investment Casting

Investment casting uses a pattern that may be made from wax, plastic, or other material. After the mold is made, the pattern is melted out. Thus a mechanized method of casting a great many patterns is necessary. The mold material is dependent upon the melting point of the cast metal. Thus a plaster mold can be used for some materials while others would require a ceramic mold. After the pattern is melted out, the mold is baked or fired; when firing is completed, the molten metal may be poured into the hot mold and allowed to cool.

If a number of castings are to be made, then metal or permanent molds may be suitable. Such molds have the advantage that the surfaces are smooth, bright, and accurate, so that little, if any, machining is required. *Metal-mold castings* are also known as *die castings* and *centrifugal castings*.

2-11 Powder-Metallurgy Process

The powder-metallurgy process is a quantity-production process that uses powders from a single metal, several metals, or a mixture of metals and nonmetals. It consists essentially of mechanically mixing the powders, compacting them in dies at high pressures,

and heating the compacted part at a temperature less than the melting point of the major ingredient. The particles are united into a single strong part similar to what would be obtained by melting the same ingredients together. The advantages are (1) the elimination of scrap or waste material, (2) the elimination of machining operations, (3) the low unit cost when mass-produced, and (4) the exact control of composition. Some of the disadvantages are (1) the high cost of dies, (2) the lower physical properties, (3) the higher cost of materials, (4) the limitations on the design, and (5) the limited range of materials that can be used. Parts commonly made by this process are oil-impregnated bearings, incandescent lamp filaments, cemented-carbide tips for tools, and permanent magnets. Some products can be made only by powder metallurgy: surgical implants, for example. The structure is different from what can be obtained by melting the same ingredients.

2-12 Hot-Working Processes

By *hot working* are meant such processes as rolling, forging, hot extrusion, and hot pressing, in which the metal is heated above its recrystallation temperature.

Hot rolling is usually used to create a bar of material of a particular shape and dimension. Figure 2-11 shows some of the various shapes that are commonly produced by the hot-rolling process. All of them are available in many different sizes as well as in different materials. The materials most available in the hot-rolled bar sizes are steel, aluminum, magnesium, and copper alloys.

Tubing can be manufactured by hot-rolling strip or plate. The edges of the strip are rolled together, creating seams that are either butt-welded or lap-welded. Seamless tubing is manufactured by roll-piercing a solid heated rod with a piercing mandrel.

Extrusion is the process by which great pressure is applied to a heated metal billet or blank, causing it to flow through a restricted orifice. This process is more common with materials of low melting point, such as aluminum, copper, magnesium, lead, tin, and zinc. Stainless steel extrusions are available on a more limited basis.

Forging is the hot working of metal by hammers, presses, or forging machines. In common with other hot-working processes, forging produces a refined grain structure that results in increased strength and ductility. Compared with castings, forgings have greater strength for the same weight. In addition, drop forgings can be made smoother and more accurate than sand castings, so that less machining is necessary. However, the initial cost of the forging dies is usually greater than the cost of patterns for castings, although the greater unit strength rather than the cost is usually the deciding factor between these two processes.

Figure 2-11

Common shapes available through hot rolling.

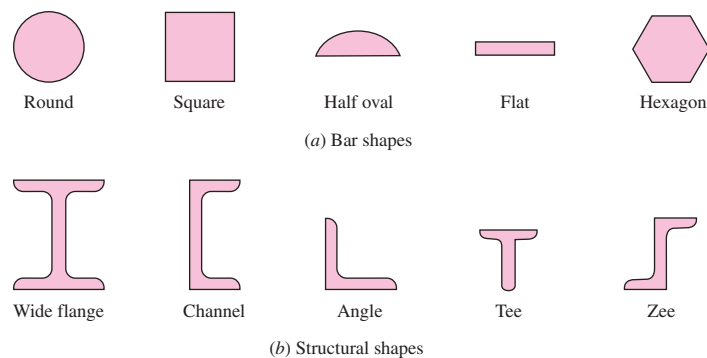
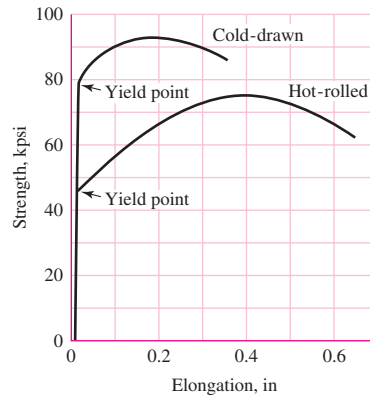


Figure 2-12

Stress-strain diagram for hot-rolled and cold-drawn UNS G10350 steel.



2-13 Cold-Working Processes

By *cold working* is meant the forming of the metal while at a low temperature (usually room temperature). In contrast to parts produced by hot working, cold-worked parts have a bright new finish, are more accurate, and require less machining.

Cold-finished bars and shafts are produced by rolling, drawing, turning, grinding, and polishing. Of these methods, by far the largest percentage of products are made by the cold-rolling and cold-drawing processes. Cold rolling is now used mostly for the production of wide flats and sheets. Practically all cold-finished bars are made by cold drawing but even so are sometimes mistakenly called “cold-rolled bars.” In the drawing process, the hot-rolled bars are first cleaned of scale and then drawn by pulling them through a die that reduces the size about $\frac{1}{32}$ to $\frac{1}{16}$ in. This process does not remove material from the bar but reduces, or “draws” down, the size. Many different shapes of hot-rolled bars may be used for cold drawing.

Cold rolling and cold drawing have the same effect upon the mechanical properties. The cold-working process does not change the grain size but merely distorts it. Cold working results in a large increase in yield strength, an increase in ultimate strength and hardness, and a decrease in ductility. In Fig. 2-12 the properties of a cold-drawn bar are compared with those of a hot-rolled bar of the same material.

Heading is a cold-working process in which the metal is gathered, or upset. This operation is commonly used to make screw and rivet heads and is capable of producing a wide variety of shapes. *Roll threading* is the process of rolling threads by squeezing and rolling a blank between two serrated dies. *Spinning* is the operation of working sheet material around a rotating form into a circular shape. *Stamping* is the term used to describe punch-press operations such as *blanking*, *coining*, *forming*, and *shallow drawing*.

2-14 The Heat Treatment of Steel

Heat treatment of steel refers to time- and temperature-controlled processes that relieve residual stresses and/or modifies material properties such as hardness (strength), ductility, and toughness. Other mechanical or chemical operations are sometimes grouped under the heading of heat treatment. The common heat-treating operations are annealing, quenching, tempering, and case hardening.

Annealing

When a material is cold- or hot-worked, residual stresses are built in, and, in addition, the material usually has a higher hardness as a result of these working operations. These operations change the structure of the material so that it is no longer represented by the equilibrium diagram. Full annealing and normalizing is a heating operation that permits the material to transform according to the equilibrium diagram. The material to be annealed is heated to a temperature that is approximately 100°F above the critical temperature. It is held at this temperature for a time that is sufficient for the carbon to become dissolved and diffused through the material. The object being treated is then allowed to cool slowly, usually in the furnace in which it was treated. If the transformation is complete, then it is said to have a full anneal. Annealing is used to soften a material and make it more ductile, to relieve residual stresses, and to refine the grain structure.

The term *annealing* includes the process called *normalizing*. Parts to be normalized may be heated to a slightly higher temperature than in full annealing. This produces a coarser grain structure, which is more easily machined if the material is a low-carbon steel. In the normalizing process the part is cooled in still air at room temperature. Since this cooling is more rapid than the slow cooling used in full annealing, less time is available for equilibrium, and the material is harder than fully annealed steel. Normalizing is often used as the final treating operation for steel. The cooling in still air amounts to a slow quench.

Quenching

Eutectoid steel that is fully annealed consists entirely of pearlite, which is obtained from austenite under conditions of equilibrium. A fully annealed hypoeutectoid steel would consist of pearlite plus ferrite, while hypereutectoid steel in the fully annealed condition would consist of pearlite plus cementite. The hardness of steel of a given carbon content depends upon the structure that replaces the pearlite when full annealing is not carried out.

The absence of full annealing indicates a more rapid rate of cooling. The rate of cooling is the factor that determines the hardness. A controlled cooling rate is called *quenching*. A mild quench is obtained by cooling in still air, which, as we have seen, is obtained by the normalizing process. The two most widely used media for quenching are water and oil. The oil quench is quite slow but prevents quenching cracks caused by rapid expansion of the object being treated. Quenching in water is used for carbon steels and for medium-carbon, low-alloy steels.

The effectiveness of quenching depends upon the fact that when austenite is cooled it does not transform into pearlite instantaneously but requires time to initiate and complete the process. Since the transformation ceases at about 800°F, it can be prevented by rapidly cooling the material to a lower temperature. When the material is cooled rapidly to 400°F or less, the austenite is transformed into a structure called *martensite*. Martensite is a supersaturated solid solution of carbon in ferrite and is the hardest and strongest form of steel.

If steel is rapidly cooled to a temperature between 400 and 800°F and held there for a sufficient length of time, the austenite is transformed into a material that is generally called *bainite*. Bainite is a structure intermediate between pearlite and martensite. Although there are several structures that can be identified between the temperatures given, depending upon the temperature used, they are collectively known as bainite. By the choice of this transformation temperature, almost any variation of structure may be obtained. These range all the way from coarse pearlite to fine martensite.

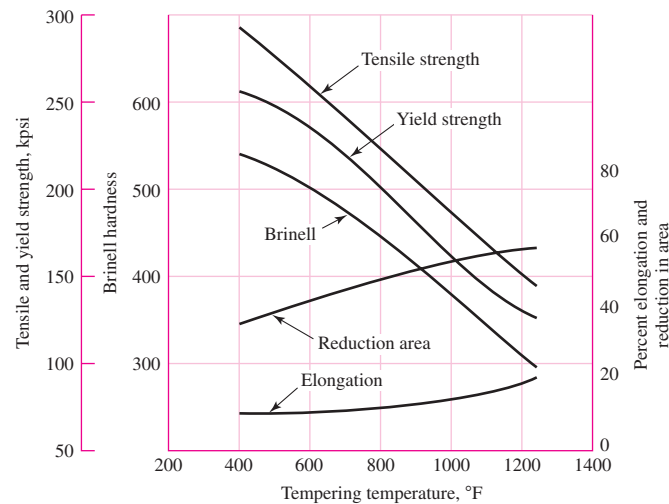
Tempering

When a steel specimen has been fully hardened, it is very hard and brittle and has high residual stresses. The steel is unstable and tends to contract on aging. This tendency is increased when the specimen is subjected to externally applied loads, because the resultant stresses contribute still more to the instability. These internal stresses can be relieved by a modest heating process called *stress relieving*, or a combination of stress relieving and softening called *tempering* or *drawing*. After the specimen has been fully hardened by being quenched from above the critical temperature, it is reheated to some temperature below the critical temperature for a certain period of time and then allowed to cool in still air. The temperature to which it is reheated depends upon the composition and the degree of hardness or toughness desired.⁸ This reheating operation releases the carbon held in the martensite, forming carbide crystals. The structure obtained is called *tempered martensite*. It is now essentially a superfine dispersion of iron carbide(s) in fine-grained ferrite.

The effect of heat-treating operations upon the various mechanical properties of a low alloy steel is shown graphically in Fig. 2–13.

Figure 2-13

The effect of thermal-mechanical history on the mechanical properties of AISI 4340 steel. (Prepared by the International Nickel Company.)



Condition	Tensile strength, kpsi	Yield strength, kpsi	Reduction in area, %	Elongation in 2 in, %	Brinell hardness, Bhn
Normalized	200	147	20	10	410
As rolled	190	144	18	9	380
Annealed	120	99	43	18	228

⁸For the quantitative aspects of tempering in plain carbon and low-alloy steels, see Charles R. Mischke, "The Strength of Cold-Worked and Heat-Treated Steels," Chap. 33 in Joseph E. Shigley, Charles R. Mischke, and Thomas H. Brown, Jr. (eds.), *Standard Handbook of Machine Design*, 3rd ed., McGraw-Hill, New York, 2004.

Case Hardening

The purpose of case hardening is to produce a hard outer surface on a specimen of low-carbon steel while at the same time retaining the ductility and toughness in the core. This is done by increasing the carbon content at the surface. Either solid, liquid, or gaseous carburizing materials may be used. The process consists of introducing the part to be carburized into the carburizing material for a stated time and at a stated temperature, depending upon the depth of case desired and the composition of the part. The part may then be quenched directly from the carburization temperature and tempered, or in some cases it must undergo a double heat treatment in order to ensure that both the core and the case are in proper condition. Some of the more useful case-hardening processes are pack carburizing, gas carburizing, nitriding, cyaniding, induction hardening, and flame hardening. In the last two cases carbon is not added to the steel in question, generally a medium carbon steel, for example SAE/AISI 1144.

Quantitative Estimation of Properties of Heat-Treated Steels

Courses in metallurgy (or material science) for mechanical engineers usually present the addition method of Crafts and Lamont for the prediction of heat-treated properties from the Jominy test for plain carbon steels.⁹ If this has not been in your prerequisite experience, then refer to the *Standard Handbook of Machine Design*, where the addition method is covered with examples.¹⁰ If this book is a textbook for a machine elements course, it is a good class project (many hands make light work) to study the method and report to the class.

For low-alloy steels, the multiplication method of Grossman¹¹ and Field¹² is explained in the *Standard Handbook of Machine Design* (Secs. 29.6 and 33.6).

Modern Steels and Their Properties Handbook explains how to predict the Jominy curve by the method of Grossman and Field from a ladle analysis and grain size.¹³ Bethlehem Steel has developed a circular plastic slide rule that is convenient to the purpose.

2-15 Alloy Steels

Although a plain carbon steel is an alloy of iron and carbon with small amounts of manganese, silicon, sulfur, and phosphorus, the term *alloy steel* is applied when one or more elements other than carbon are introduced in sufficient quantities to modify its properties substantially. The alloy steels not only possess more desirable physical properties but also permit a greater latitude in the heat-treating process.

Chromium

The addition of chromium results in the formation of various carbides of chromium that are very hard, yet the resulting steel is more ductile than a steel of the same hardness produced by a simple increase in carbon content. Chromium also refines the grain structure so that these two combined effects result in both increased toughness and increased hardness. The addition of chromium increases the critical range of temperatures and moves the eutectoid point to the left. Chromium is thus a very useful alloying element.

⁹W. Crafts and J. L. Lamont, *Hardenability and Steel Selection*, Pitman and Sons, London, 1949.

¹⁰Charles R. Mischke, Chap. 33 in Joseph E. Shigley, Charles R. Mischke, and Thomas H. Brown, Jr. (eds.), *Standard Handbook of Machine Design*, 3rd ed., McGraw-Hill, New York, 2004, p. 33.9.

¹¹M. A. Grossman, *AIME*, February 1942.

¹²J. Field, *Metals Progress*, March 1943.

¹³*Modern Steels and Their Properties*, 7th ed., Handbook 2757, Bethlehem Steel, 1972, pp. 46–50.

Nickel

The addition of nickel to steel also causes the eutectoid point to move to the left and increases the critical range of temperatures. Nickel is soluble in ferrite and does not form carbides or oxides. This increases the strength without decreasing the ductility. Case hardening of nickel steels results in a better core than can be obtained with plain carbon steels. Chromium is frequently used in combination with nickel to obtain the toughness and ductility provided by the nickel and the wear resistance and hardness contributed by the chromium.

Manganese

Manganese is added to all steels as a deoxidizing and desulfurizing agent, but if the sulfur content is low and the manganese content is over 1 percent, the steel is classified as a manganese alloy. Manganese dissolves in the ferrite and also forms carbides. It causes the eutectoid point to move to the left and lowers the critical range of temperatures. It increases the time required for transformation so that oil quenching becomes practicable.

Silicon

Silicon is added to all steels as a deoxidizing agent. When added to very-low-carbon steels, it produces a brittle material with a low hysteresis loss and a high magnetic permeability. The principal use of silicon is with other alloying elements, such as manganese, chromium, and vanadium, to stabilize the carbides.

Molybdenum

While molybdenum is used alone in a few steels, it finds its greatest use when combined with other alloying elements, such as nickel, chromium, or both. Molybdenum forms carbides and also dissolves in ferrite to some extent, so that it adds both hardness and toughness. Molybdenum increases the critical range of temperatures and substantially lowers the transformation point. Because of this lowering of the transformation point, molybdenum is most effective in producing desirable oil-hardening and air-hardening properties. Except for carbon, it has the greatest hardening effect, and because it also contributes to a fine grain size, this results in the retention of a great deal of toughness.

Vanadium

Vanadium has a very strong tendency to form carbides; hence it is used only in small amounts. It is a strong deoxidizing agent and promotes a fine grain size. Since some vanadium is dissolved in the ferrite, it also toughens the steel. Vanadium gives a wide hardening range to steel, and the alloy can be hardened from a higher temperature. It is very difficult to soften vanadium steel by tempering; hence, it is widely used in tool steels.

Tungsten

Tungsten is widely used in tool steels because the tool will maintain its hardness even at red heat. Tungsten produces a fine, dense structure and adds both toughness and hardness. Its effect is similar to that of molybdenum, except that it must be added in greater quantities.

2-16 Corrosion-Resistant Steels

Iron-base alloys containing at least 12 percent chromium are called *stainless steels*. The most important characteristic of these steels is their resistance to many, but not all, corrosive conditions. The four types available are the ferritic chromium steels, the

austenitic chromium-nickel steels, and the martensitic and precipitation-hardenable stainless steels.

The ferritic chromium steels have a chromium content ranging from 12 to 27 percent. Their corrosion resistance is a function of the chromium content, so that alloys containing less than 12 percent still exhibit some corrosion resistance, although they may rust. The quench-hardenability of these steels is a function of both the chromium and the carbon content. The very high carbon steels have good quench hardenability up to about 18 percent chromium, while in the lower carbon ranges it ceases at about 13 percent. If a little nickel is added, these steels retain some degree of hardenability up to 20 percent chromium. If the chromium content exceeds 18 percent, they become difficult to weld, and at the very high chromium levels the hardness becomes so great that very careful attention must be paid to the service conditions. Since chromium is expensive, the designer will choose the lowest chromium content consistent with the corrosive conditions.

The chromium-nickel stainless steels retain the austenitic structure at room temperature; hence, they are not amenable to heat treatment. The strength of these steels can be greatly improved by cold working. They are not magnetic unless cold-worked. Their work hardenability properties also cause them to be difficult to machine. All the chromium-nickel steels may be welded. They have greater corrosion-resistant properties than the plain chromium steels. When more chromium is added for greater corrosion resistance, more nickel must also be added if the austenitic properties are to be retained.

2-17 Casting Materials

Gray Cast Iron

Of all the cast materials, gray cast iron is the most widely used. This is because it has a very low cost, is easily cast in large quantities, and is easy to machine. The principal objections to the use of gray cast iron are that it is brittle and that it is weak in tension. In addition to a high carbon content (over 1.7 percent and usually greater than 2 percent), cast iron also has a high silicon content, with low percentages of sulfur, manganese, and phosphorus. The resultant alloy is composed of pearlite, ferrite, and graphite, and under certain conditions the pearlite may decompose into graphite and ferrite. The resulting product then contains all ferrite and graphite. The graphite, in the form of thin flakes distributed evenly throughout the structure, darkens it; hence, the name *gray cast iron*.

Gray cast iron is not readily welded, because it may crack, but this tendency may be reduced if the part is carefully preheated. Although the castings are generally used in the as-cast condition, a mild anneal reduces cooling stresses and improves the machinability. The tensile strength of gray cast iron varies from 100 to 400 MPa (15 to 60 kpsi), and the compressive strengths are 3 to 4 times the tensile strengths. The modulus of elasticity varies widely, with values extending all the way from 75 to 150 GPa (11 to 22 Mpsi).

Ductile and Nodular Cast Iron

Because of the lengthy heat treatment required to produce malleable cast iron, engineers have long desired a cast iron that would combine the ductile properties of malleable iron with the ease of casting and machining of gray iron and at the same time would possess these properties in the as-cast conditions. A process for producing such a material using magnesium-containing material seems to fulfill these requirements.

Ductile cast iron, or *nodular cast iron*, as it is sometimes called, is essentially the same as malleable cast iron, because both contain graphite in the form of spheroids. However, ductile cast iron in the as-cast condition exhibits properties very close to those of malleable iron, and if a simple 1-h anneal is given and is followed by a slow cool, it exhibits even more ductility than the malleable product. Ductile iron is made by adding MgFeSi to the melt; since magnesium boils at this temperature, it is necessary to alloy it with other elements before it is introduced.

Ductile iron has a high modulus of elasticity (172 GPa or 25 Mpsi) as compared with gray cast iron, and it is elastic in the sense that a portion of the stress-strain curve is a straight line. Gray cast iron, on the other hand, does not obey Hooke's law, because the modulus of elasticity steadily decreases with increase in stress. Like gray cast iron, however, nodular iron has a compressive strength that is higher than the tensile strength, although the difference is not as great. In 40 years it has become extensively used.

White Cast Iron

If all the carbon in cast iron is in the form of cementite and pearlite, with no graphite present, the resulting structure is white and is known as *white cast iron*. This may be produced in two ways. The composition may be adjusted by keeping the carbon and silicon content low, or the gray-cast-iron composition may be cast against chills in order to promote rapid cooling. By either method, a casting with large amounts of cementite is produced, and as a result the product is very brittle and hard to machine but also very resistant to wear. A chill is usually used in the production of gray-iron castings in order to provide a very hard surface within a particular area of the casting, while at the same time retaining the more desirable gray structure within the remaining portion. This produces a relatively tough casting with a wear-resistant area.

Malleable Cast Iron

If white cast iron within a certain composition range is annealed, a product called *malleable cast iron* is formed. The annealing process frees the carbon so that it is present as graphite, just as in gray cast iron but in a different form. In gray cast iron the graphite is present in a thin flake form, while in malleable cast iron it has a nodular form and is known as *temper carbon*. A good grade of malleable cast iron may have a tensile strength of over 350 MPa (50 kpsi), with an elongation of as much as 18 percent. The percentage elongation of a gray cast iron, on the other hand, is seldom over 1 percent. Because of the time required for annealing (up to 6 days for large and heavy castings), malleable iron is necessarily somewhat more expensive than gray cast iron.

Alloy Cast Irons

Nickel, chromium, and molybdenum are the most common alloying elements used in cast iron. Nickel is a general-purpose alloying element, usually added in amounts up to 5 percent. Nickel increases the strength and density, improves the wearing qualities, and raises the machinability. If the nickel content is raised to 10 to 18 percent, an austenitic structure with valuable heat- and corrosion-resistant properties results. Chromium increases the hardness and wear resistance and, when used with a chill, increases the tendency to form white iron. When chromium and nickel are both added, the hardness and strength are improved without a reduction in the machinability rating. Molybdenum added in quantities up to 1.25 percent increases the stiffness, hardness, tensile strength, and impact resistance. It is a widely used alloying element.

Cast Steels

The advantage of the casting process is that parts having complex shapes can be manufactured at costs less than fabrication by other means, such as welding. Thus the choice of steel castings is logical when the part is complex and when it must also have a high strength. The higher melting temperatures for steels do aggravate the casting problems and require closer attention to such details as core design, section thicknesses, fillets, and the progress of cooling. The same alloying elements used for the wrought steels can be used for cast steels to improve the strength and other mechanical properties. Cast-steel parts can also be heat-treated to alter the mechanical properties, and, unlike the cast irons, they can be welded.

2-18 Nonferrous Metals

Aluminum

The outstanding characteristics of aluminum and its alloys are their strength-weight ratio, their resistance to corrosion, and their high thermal and electrical conductivity. The density of aluminum is about 2770 kg/m^3 (0.10 lbf/in^3), compared with 7750 kg/m^3 (0.28 lbf/in^3) for steel. Pure aluminum has a tensile strength of about 90 MPa (13 kpsi), but this can be improved considerably by cold working and also by alloying with other materials. The modulus of elasticity of aluminum, as well as of its alloys, is 71.7 GPa (10.4 Mpsi), which means that it has about one-third the stiffness of steel.

Considering the cost and strength of aluminum and its alloys, they are among the most versatile materials from the standpoint of fabrication. Aluminum can be processed by sand casting, die casting, hot or cold working, or extruding. Its alloys can be machined, press-worked, soldered, brazed, or welded. Pure aluminum melts at 660°C (1215°F), which makes it very desirable for the production of either permanent or sand-mold castings. It is commercially available in the form of plate, bar, sheet, foil, rod, and tube and in structural and extruded shapes. Certain precautions must be taken in joining aluminum by soldering, brazing, or welding; these joining methods are not recommended for all alloys.

The corrosion resistance of the aluminum alloys depends upon the formation of a thin oxide coating. This film forms spontaneously because aluminum is inherently very reactive. Constant erosion or abrasion removes this film and allows corrosion to take place. An extra-heavy oxide film may be produced by the process called *anodizing*. In this process the specimen is made to become the anode in an electrolyte, which may be chromic acid, oxalic acid, or sulfuric acid. It is possible in this process to control the color of the resulting film very accurately.

The most useful alloying elements for aluminum are copper, silicon, manganese, magnesium, and zinc. Aluminum alloys are classified as *casting alloys* or *wrought alloys*. The casting alloys have greater percentages of alloying elements to facilitate casting, but this makes cold working difficult. Many of the casting alloys, and some of the wrought alloys, cannot be hardened by heat treatment. The alloys that are heat-treatable use an alloying element that dissolves in the aluminum. The heat treatment consists of heating the specimen to a temperature that permits the alloying element to pass into solution, then quenching so rapidly that the alloying element is not precipitated. The aging process may be accelerated by heating slightly, which results in even greater hardness and strength. One of the better-known heat-treatable alloys is duraluminum, or 2017 (4 percent Cu, 0.5 percent Mg, 0.5 percent Mn). This alloy hardens in 4 days at room temperature. Because of this rapid aging, the alloy must be stored under

refrigeration after quenching and before forming, or it must be formed immediately after quenching. Other alloys (such as 5053) have been developed that age-harden much more slowly, so that only mild refrigeration is required before forming. After forming, they are artificially aged in a furnace and possess approximately the same strength and hardness as the 2024 alloys. Those alloys of aluminum that cannot be heat-treated can be hardened only by cold working. Both work hardening and the hardening produced by heat treatment may be removed by an annealing process.

Magnesium

The density of magnesium is about 1800 kg/m^3 (0.065 lb/in^3), which is two-thirds that of aluminum and one-fourth that of steel. Since it is the lightest of all commercial metals, its greatest use is in the aircraft and automotive industries, but other uses are now being found for it. Although the magnesium alloys do not have great strength, because of their light weight the strength-weight ratio compares favorably with the stronger aluminum and steel alloys. Even so, magnesium alloys find their greatest use in applications where strength is not an important consideration. Magnesium will not withstand elevated temperatures; the yield point is definitely reduced when the temperature is raised to that of boiling water.

Magnesium and its alloys have a modulus of elasticity of 45 GPa (6.5 Mpsi) in tension and in compression, although some alloys are not as strong in compression as in tension. Curiously enough, cold working reduces the modulus of elasticity. A range of cast magnesium alloys are also available.

Titanium

Titanium and its alloys are similar in strength to moderate-strength steel but weigh half as much as steel. The material exhibits very good resistance to corrosion, has low thermal conductivity, is nonmagnetic, and has high-temperature strength. Its modulus of elasticity is between those of steel and aluminum at 16.5 Mpsi (114 GPa). Because of its many advantages over steel and aluminum, applications include: aerospace and military aircraft structures and components, marine hardware, chemical tanks and processing equipment, fluid handling systems, and human internal replacement devices. The disadvantages of titanium are its high cost compared to steel and aluminum and the difficulty of machining it.

Copper-Base Alloys

When copper is alloyed with zinc, it is usually called *brass*. If it is alloyed with another element, it is often called *bronze*. Sometimes the other element is specified too, as, for example, *tin bronze* or *phosphor bronze*. There are hundreds of variations in each category.

Brass with 5 to 15 Percent Zinc

The low-zinc brasses are easy to cold work, especially those with the higher zinc content. They are ductile but often hard to machine. The corrosion resistance is good. Alloys included in this group are *gilding brass* (5 percent Zn), *commercial bronze* (10 percent Zn), and *red brass* (15 percent Zn). Gilding brass is used mostly for jewelry and articles to be gold-plated; it has the same ductility as copper but greater strength, accompanied by poor machining characteristics. Commercial bronze is used for jewelry and for forgings and stampings, because of its ductility. Its machining properties are poor, but it has excellent cold-working properties. Red brass has good corrosion resistance as well as high-temperature strength. Because of this it is used a great deal in the form of tubing or piping to carry hot water in such applications as radiators or condensers.

Brass with 20 to 36 Percent Zinc

Included in the intermediate-zinc group are *low brass* (20 percent Zn), *cartridge brass* (30 percent Zn), and *yellow brass* (35 percent Zn). Since zinc is cheaper than copper, these alloys cost less than those with more copper and less zinc. They also have better machinability and slightly greater strength; this is offset, however, by poor corrosion resistance and the possibility of cracking at points of residual stresses. Low brass is very similar to red brass and is used for articles requiring deep-drawing operations. Of the copper-zinc alloys, cartridge brass has the best combination of ductility and strength. Cartridge cases were originally manufactured entirely by cold working; the process consisted of a series of deep draws, each draw being followed by an anneal to place the material in condition for the next draw, hence the name cartridge brass. Although the hot-working ability of yellow brass is poor, it can be used in practically any other fabricating process and is therefore employed in a large variety of products.

When small amounts of lead are added to the brasses, their machinability is greatly improved and there is some improvement in their abilities to be hot-worked. The addition of lead impairs both the cold-working and welding properties. In this group are *low-leaded brass* ($32\frac{1}{2}$ percent Zn, $\frac{1}{2}$ percent Pb), *high-leaded brass* (34 percent Zn, 2 percent Pb), and *free-cutting brass* ($35\frac{1}{2}$ percent Zn, 3 percent Pb). The low-leaded brass is not only easy to machine but has good cold-working properties. It is used for various screw-machine parts. High-leaded brass, sometimes called *engraver's brass*, is used for instrument, lock, and watch parts. Free-cutting brass is also used for screw-machine parts and has good corrosion resistance with excellent mechanical properties.

Admiralty metal (28 percent Zn) contains 1 percent tin, which imparts excellent corrosion resistance, especially to saltwater. It has good strength and ductility but only fair machining and working characteristics. Because of its corrosion resistance it is used in power-plant and chemical equipment. *Aluminum brass* (22 percent Zn) contains 2 percent aluminum and is used for the same purposes as admiralty metal, because it has nearly the same properties and characteristics. In the form of tubing or piping, it is favored over admiralty metal, because it has better resistance to erosion caused by high-velocity water.

Brass with 36 to 40 Percent Zinc

Brasses with more than 38 percent zinc are less ductile than cartridge brass and cannot be cold-worked as severely. They are frequently hot-worked and extruded. *Muntz metal* (40 percent Zn) is low in cost and mildly corrosion-resistant. *Naval brass* has the same composition as Muntz metal except for the addition of 0.75 percent tin, which contributes to the corrosion resistance.

Bronze

Silicon bronze, containing 3 percent silicon and 1 percent manganese in addition to the copper, has mechanical properties equal to those of mild steel, as well as good corrosion resistance. It can be hot- or cold-worked, machined, or welded. It is useful wherever corrosion resistance combined with strength is required.

Phosphor bronze, made with up to 11 percent tin and containing small amounts of phosphorus, is especially resistant to fatigue and corrosion. It has a high tensile strength and a high capacity to absorb energy, and it is also resistant to wear. These properties make it very useful as a spring material.

Aluminum bronze is a heat-treatable alloy containing up to 12 percent aluminum. This alloy has strength and corrosion-resistance properties that are better than those of brass, and in addition, its properties may be varied over a wide range by cold working, heat treating,

or changing the composition. When iron is added in amounts up to 4 percent, the alloy has a high endurance limit, a high shock resistance, and excellent wear resistance.

Beryllium bronze is another heat-treatable alloy, containing about 2 percent beryllium. This alloy is very corrosion resistant and has high strength, hardness, and resistance to wear. Although it is expensive, it is used for springs and other parts subjected to fatigue loading where corrosion resistance is required.

With slight modification most copper-based alloys are available in cast form.

2-19 Plastics

The term *thermoplastics* is used to mean any plastic that flows or is moldable when heat is applied to it; the term is sometimes applied to plastics moldable under pressure. Such plastics can be remolded when heated.

A *thermoset* is a plastic for which the polymerization process is finished in a hot molding press where the plastic is liquefied under pressure. Thermoset plastics cannot be remolded.

Table 2-2 lists some of the most widely used thermoplastics, together with some of their characteristics and the range of their properties. Table 2-3, listing some of the

Table 2-2

The Thermoplastics Source: These data have been obtained from the *Machine Design Materials Reference Issue*, published by Penton/IPC, Cleveland. These reference issues are published about every 2 years and constitute an excellent source of data on a great variety of materials.

Name	S_u , kpsi	E , Mpsi	Hardness Rockwell	Elongation %	Dimensional Stability	Heat Resistance	Chemical Resistance	Processing
ABS group	2–8	0.10–0.37	60–110R	3–50	Good	*	Fair	EMST
Acetal group	8–10	0.41–0.52	80–94M	40–60	Excellent	Good	High	M
Acrylic	5–10	0.20–0.47	92–110M	3–75	High	*	Fair	EMS
Fluoroplastic group	0.50–7	...	50–80D	100–300	High	Excellent	Excellent	MPR†
Nylon	8–14	0.18–0.45	112–120R	10–200	Poor	Poor	Good	CEM
Phenylene oxide	7–18	0.35–0.92	115R, 106L	5–60	Excellent	Good	Fair	EFM
Polycarbonate	8–16	0.34–0.86	62–91M	10–125	Excellent	Excellent	Fair	EMS
Polyester	8–18	0.28–1.6	65–90M	1–300	Excellent	Poor	Excellent	CLMR
Polyimide	6–50	...	88–120M	Very low	Excellent	Excellent	Excellent†	CLMP
Polyphenylene sulfide	14–19	0.11	122R	1.0	Good	Excellent	Excellent	M
Polystyrene group	1.5–12	0.14–0.60	10–90M	0.5–60	...	Poor	Poor	EM
Polysulfone	10	0.36	120R	50–100	Excellent	Excellent	Excellent†	EFM
Polyvinyl chloride	1.5–7.5	0.35–0.60	65–85D	40–450	...	Poor	Poor	EFM

*Heat-resistant grades available.

†With exceptions.

C Coatings L Laminates R Resins E Extrusions M Moldings S Sheet F Foams P Press and sinter methods T Tubing

Table 2-3

The Thermosets *Source:* These data have been obtained from the *Machine Design Materials Reference Issue*, published by Penton/IPC, Cleveland. These reference issues are published about every 2 years and constitute an excellent source of data on a great variety of materials.

Name	S_{ur} kpsi	E , Mpsi	Hardness Rockwell	Elongation %	Dimensional Stability	Heat Resistance	Chemical Resistance	Processing
Alkyd	3–9	0.05–0.30	99M*	...	Excellent	Good	Fair	M
Allylic	4–10	...	105–120M	...	Excellent	Excellent	Excellent	CM
Amino group	5–8	0.13–0.24	110–120M	0.30–0.90	Good	Excellent*	Excellent*	LR
Epoxy	5–20	0.03–0.30*	80–120M	1–10	Excellent	Excellent	Excellent	CMR
Phenolics	5–9	0.10–0.25	70–95E	...	Excellent	Excellent	Good	EMR
Silicones	5–6	...	80–90M	Excellent	Excellent	CLMR

*With exceptions.

C Coatings L Laminates R Resins E Extrusions M Moldings S Sheet F Foams P Press and sinter methods T Tubing

thermosets, is similar. These tables are presented for information only and should not be used to make a final design decision. The range of properties and characteristics that can be obtained with plastics is very great. The influence of many factors, such as cost, moldability, coefficient of friction, weathering, impact strength, and the effect of fillers and reinforcements, must be considered. Manufacturers' catalogs will be found quite helpful in making possible selections.

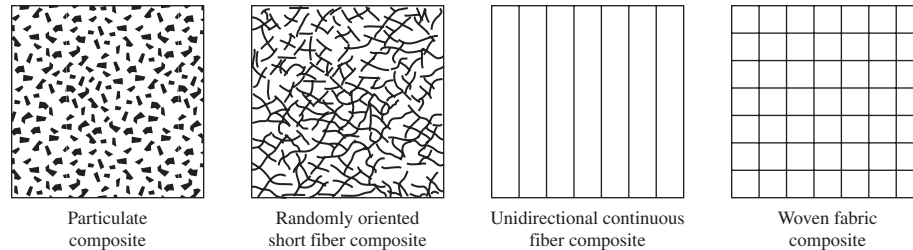
2-20 Composite Materials¹⁴

Composite materials are formed from two or more dissimilar materials, each of which contributes to the final properties. Unlike metallic alloys, the materials in a composite remain distinct from each other at the macroscopic level.

Most engineering composites consist of two materials: a reinforcement called a *filler* and a *matrix*. The filler provides stiffness and strength; the matrix holds the material together and serves to transfer load among the discontinuous reinforcements. The most common reinforcements, illustrated in Fig. 2-14, are continuous fibers, either straight or woven, short chopped fibers, and particulates. The most common matrices are various plastic resins although other materials including metals are used.

Metals and other traditional engineering materials are uniform, or isotropic, in nature. This means that material properties, such as strength, stiffness, and thermal conductivity, are independent of both position within the material and the choice of coordinate system. The discontinuous nature of composite reinforcements, though, means that material properties can vary with both position and direction. For example, an

¹⁴For references see I. M. Daniel and O. Ishai, *Engineering Mechanics of Composite Materials*, Oxford University Press, 1994, and *ASM Engineered Materials Handbook: Composites*, ASM International, Materials Park, OH, 1988.

Figure 2-14Composites categorized by
type of reinforcement.

epoxy resin reinforced with continuous graphite fibers will have very high strength and stiffness in the direction of the fibers, but very low properties normal or transverse to the fibers. For this reason, structures of composite materials are normally constructed of multiple plies (laminates) where each ply is oriented to achieve optimal structural stiffness and strength performance.

High strength-to-weight ratios, up to 5 times greater than those of high-strength steels, can be achieved. High stiffness-to-weight ratios can also be obtained, as much as 8 times greater than those of structural metals. For this reason, composite materials are becoming very popular in automotive, aircraft, and spacecraft applications where weight is a premium.

The directionality of properties of composite materials increases the complexity of structural analyses. Isotropic materials are fully defined by two engineering constants: Young's modulus E and Poisson's ratio ν . A single ply of a composite material, however, requires four constants, defined with respect to the ply coordinate system. The constants are two Young's moduli (the longitudinal modulus in the direction of the fibers, E_1 , and the transverse modulus normal to the fibers, E_2), one Poisson's ratio (ν_{12} , called the major Poisson's ratio), and one shear modulus (G_{12}). A fifth constant, the minor Poisson's ratio, ν_{21} , is determined through the reciprocity relation, $\nu_{21}/E_2 = \nu_{12}/E_1$. Combining this with multiple plies oriented at different angles makes structural analysis of complex structures unapproachable by manual techniques. For this reason, computer software is available to calculate the properties of a laminated composite construction.¹⁵

2-21 Materials Selection

As stated earlier, the selection of a material for a machine part or structural member is one of the most important decisions the designer is called on to make. Up to this point in this chapter we have discussed many important material physical properties, various characteristics of typical engineering materials, and various material production processes. The actual selection of a material for a particular design application can be an easy one, say, based on previous applications (1020 steel is always a good candidate because of its many positive attributes), or the selection process can be as involved and daunting as any design problem with the evaluation of the many material physical, economical, and processing parameters. There are systematic and optimizing approaches to material selection. Here, for illustration, we will only look at how to approach some material properties. One basic technique is to list all the important material properties associated with the design, e.g., strength, stiffness, and cost. This can be prioritized by using a weighting measure depending on what properties are more

¹⁵About Composite Materials Software listing, <http://composite.about.com/cs/software/index.htm>.

important than others. Next, for each property, list all available materials and rank them in order beginning with the best material; e.g., for strength, high-strength steel such as 4340 steel should be near the top of the list. For completeness of available materials, this might require a large source of material data. Once the lists are formed, select a manageable amount of materials from the top of each list. From each reduced list select the materials that are contained within every list for further review. The materials in the reduced lists can be graded within the list and then weighted according to the importance of each property.

M. F. Ashby has developed a powerful systematic method using *materials selection charts*.¹⁶ This method has also been implemented in a software package called CES Edupack.¹⁷ The charts display data of various properties for the families and classes of materials listed in Table 2–4. For example, considering material stiffness properties, a simple bar chart plotting Young’s modulus E on the y axis is shown in Fig. 2–15. Each vertical line represents the range of values of E for a particular material. Only some of the materials are labeled. Now, more material information can be displayed if the x axis represents another material property, say density.

Table 2–4

Material Families and
Classes

Family	Classes	Short Name	
Metals (the metals and alloys of engineering)	Aluminum alloys	Al alloys	
	Copper alloys	Cu alloys	
	Lead alloys	Lead alloys	
	Magnesium alloys	Mg alloys	
	Nickel alloys	Ni alloys	
	Carbon steels	Steels	
	Stainless steels	Stainless steels	
	Tin alloys	Tin alloys	
	Titanium alloys	Ti alloys	
	Tungsten alloys	W alloys	
	Lead alloys	Pb alloys	
	Zinc alloys	Zn alloys	
	Ceramics Technical ceramics (fine ceramics capable of load-bearing application)	Alumina	Al_2O_3
Aluminum nitride		AlN	
Boron carbide		B_4C	
Silicon carbide		SiC	
Silicon nitride		Si_3N_4	
Tungsten carbide		WC	
Nontechnical ceramics (porous ceramics of construction)		Brick	Brick
		Concrete	Concrete
		Stone	Stone

(continued)

¹⁶M. F. Ashby, *Materials Selection in Mechanical Design*, 3rd ed., Elsevier Butterworth-Heinemann, Oxford, 2005.

¹⁷Produced by Granta Design Limited. See www.grantadesign.com.

| **Table 2-4** (continued)

Family	Classes	Short Name
Glasses	Soda-lime glass	Soda-lime glass
	Borosilicate glass	Borosilicate glass
	Silica glass	Silica glass
	Glass ceramic	Glass ceramic
Polymers (the thermoplastics and thermosets of engineering)	Acrylonitrile butadiene styrene	ABS
	Cellulose polymers	CA
	Ionomers	Ionomers
	Epoxies	Epoxy
	Phenolics	Phenolics
	Polyamides (nylons)	PA
	Polycarbonate	PC
	Polyesters	Polyester
	Polyetheretherketone	PEEK
	Polyethylene	PE
	Polyethylene terephthalate	PET or PETE
	Polymethylmethacrylate	PMMA
	Polyoxymethylene(Acetal)	POM
	Polypropylene	PP
	Polystyrene	PS
Polytetrafluorethylene	PTFE	
Polyvinylchloride	PVC	
Elastomers (engineering rubbers, natural and synthetic)	Butyl rubber	Butyl rubber
	EVA	EVA
	Isoprene	Isoprene
	Natural rubber	Natural rubber
	Polychloroprene (Neoprene)	Neoprene
	Polyurethane	PU
	Silicon elastomers	Silicones
Hybrids	Carbon-fiber reinforced polymers	CFRP
	Glass-fiber reinforced polymers	GFRP
	SiC reinforced aluminum	Al-SiC
	Foams	Flexible polymer foams
		Rigid polymer foams
	Natural materials	Cork
		Bamboo
		Wood

Figure 2-15

Young's modulus E for various materials. (Figure courtesy of Prof. Mike Ashby, Granta Design, Cambridge, U.K.)

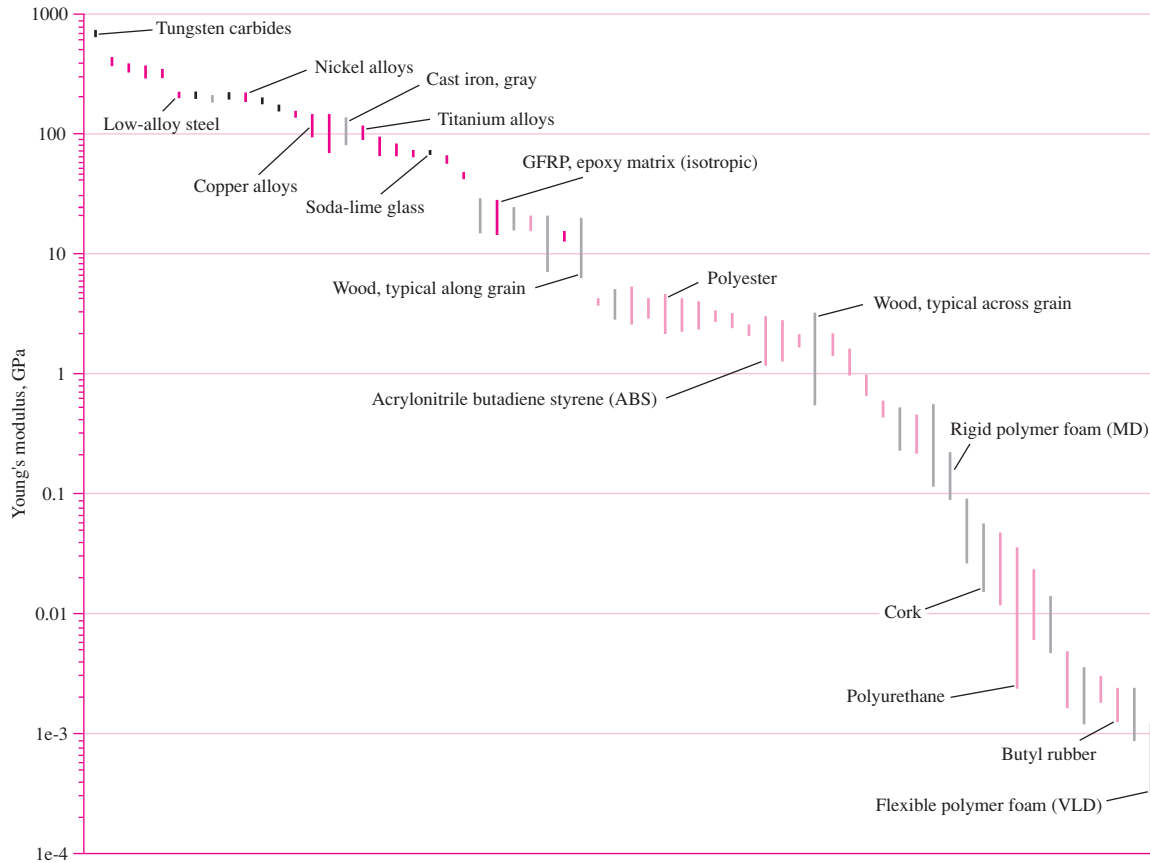


Figure 2–16, called a “bubble” chart, represents Young’s modulus E plotted against density ρ . The line ranges for each material property plotted two-dimensionally now form ellipses, or bubbles. This plot is more useful than the two separate bar charts of each property. Now, we also see how stiffness/weight for various materials relate. Figure 2–16 also shows groups of bubbles outlined according to the material families of Table 2–4. In addition, dotted lines in the lower right corner of the chart indicate ratios of E^β/ρ , which assist in material selection for minimum mass design. Lines drawn parallel to these lines represent different values for E^β/ρ . For example, several parallel dotted lines are shown in Fig. 2–16 that represent different values of E/ρ ($\beta = 1$). Since $(E/\rho)^{1/2}$ represents the speed of sound in a material, each dotted line, E/ρ , represents a different speed as indicated.

To see how β fits into the mix, consider the following. The performance metric P of a structural element depends on (1) the functional requirements, (2) the geometry, and (3) the material properties of the structure. That is,

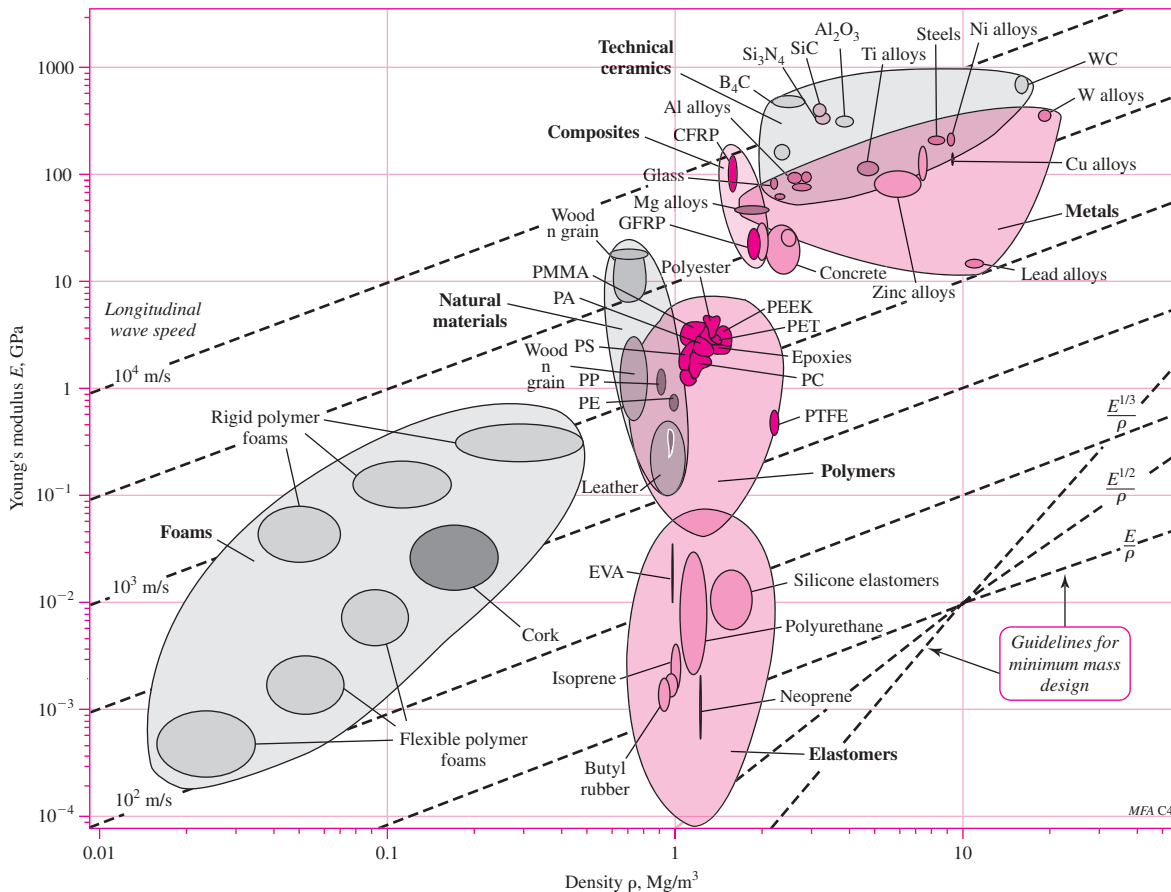
$$P = \left[\left(\text{functional requirements } F \right), \left(\text{geometric parameters } G \right), \left(\text{material properties } M \right) \right]$$

or, symbolically,

$$P = f(F, G, M) \tag{2-20}$$

Figure 2-16

Young's modulus E versus density ρ for various materials. (Figure courtesy of Prof. Mike Ashby, Granta Design, Cambridge, U.K.)



If the function is *separable*, which it often is, we can write Eq. (2–20) as

$$P = f_1(F) \cdot f_2(G) \cdot f_3(M) \quad (2-21)$$

For optimum design, we desire to maximize or minimize P . With regards to material properties alone, this is done by maximizing or minimizing $f_3(M)$, called the *material efficiency coefficient*.

For illustration, say we want to design a light, stiff, end-loaded cantilever beam with a circular cross section. For this we will use the mass m of the beam for the performance metric to minimize. The stiffness of the beam is related to its material and geometry. The stiffness of a beam is given by $k = F/\delta$, where F and δ are the end load and deflection, respectively (see Chap. 4). The end deflection of an end-loaded cantilever beam is given in Table A–9, beam 1, as $\delta = y_{\max} = (Fl^3)/(3EI)$, where E is Young's modulus, I the second moment of the area, and l the length of the beam. Thus, the stiffness is given by

$$k = \frac{F}{\delta} = \frac{3EI}{l^3} \quad (2-22)$$

From Table A–18, the second moment of the area of a circular cross section is

$$I = \frac{\pi D^4}{64} = \frac{A^2}{4\pi} \quad (2-23)$$

where D and A are the diameter and area of the cross section, respectively. Substituting Eq. (2–23) in (2–22) and solving for A , we obtain

$$A = \left(\frac{4\pi kl^3}{3E} \right)^{1/2} \quad (2-24)$$

The mass of the beam is given by

$$m = Al\rho \quad (2-25)$$

Substituting Eq. (2–24) into (2–25) and rearranging yields

$$m = 2\sqrt{\frac{\pi}{3}}(k^{1/2})(l^{5/2})\left(\frac{\rho}{E^{1/2}}\right) \quad (2-26)$$

Equation (2–26) is of the form of Eq. (2–21). The term $2\sqrt{\pi/3}$ is simply a constant and can be associated with any function, say $f_1(F)$. Thus, $f_1(F) = 2\sqrt{\pi/3}(k^{1/2})$ is the functional requirement, stiffness; $f_2(G) = (l^{5/2})$, the geometric parameter, length; and the material efficiency coefficient

$$f_3(M) = \frac{\rho}{E^{1/2}} \quad (2-27)$$

is the material property in terms of density and Young's modulus. To minimize m we want to minimize $f_3(M)$, or maximize

$$M = \frac{E^{1/2}}{\rho} \quad (2-28)$$

where M is called the *material index*, and $\beta = \frac{1}{2}$. Returning to Fig. 2–16, draw lines of various values of $E^{1/2}/\rho$ as shown in Fig. 2–17. Lines of increasing M move up and to the left as shown. Thus, we see that good candidates for a light, stiff, end-loaded cantilever beam with a circular cross section are certain woods, composites, and ceramics.

Other limits/constraints may warrant further investigation. Say, for further illustration, the design requirements indicate that we need a Young's modulus greater than 50 GPa. Figure 2–18 shows how this further restricts the search region. This eliminates woods as a possible material.

Figure 2-17

A schematic E versus ρ chart showing a grid of lines for various values the material index $M = E^{1/2}/\rho$. (From M. F. Ashby, *Materials Selection in Mechanical Design*, 3rd ed., Elsevier Butterworth-Heinemann, Oxford, 2005.)

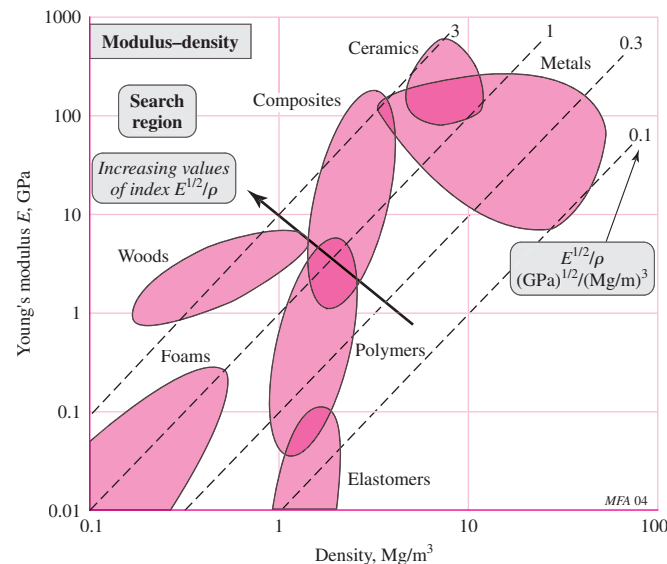


Figure 2-18

The search region of Fig. 2-16 further reduced by restricting $E \geq 50$ GPa. (From M. F. Ashby, *Materials Selection in Mechanical Design*, 3rd ed., Elsevier Butterworth-Heinemann, Oxford, 2005.)

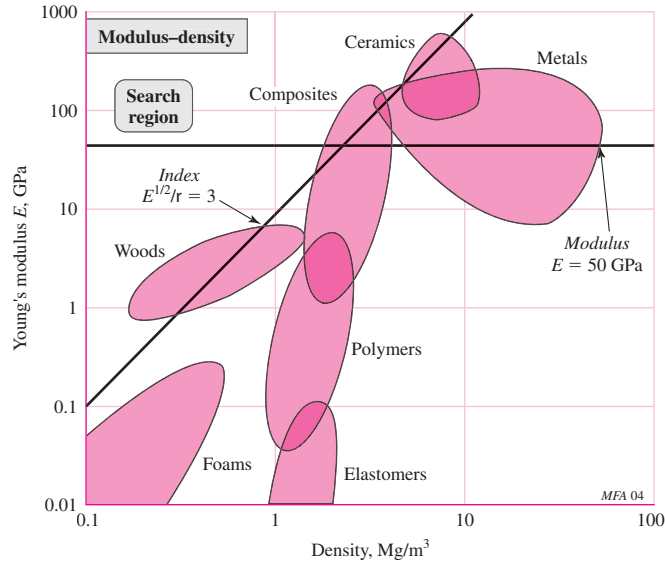
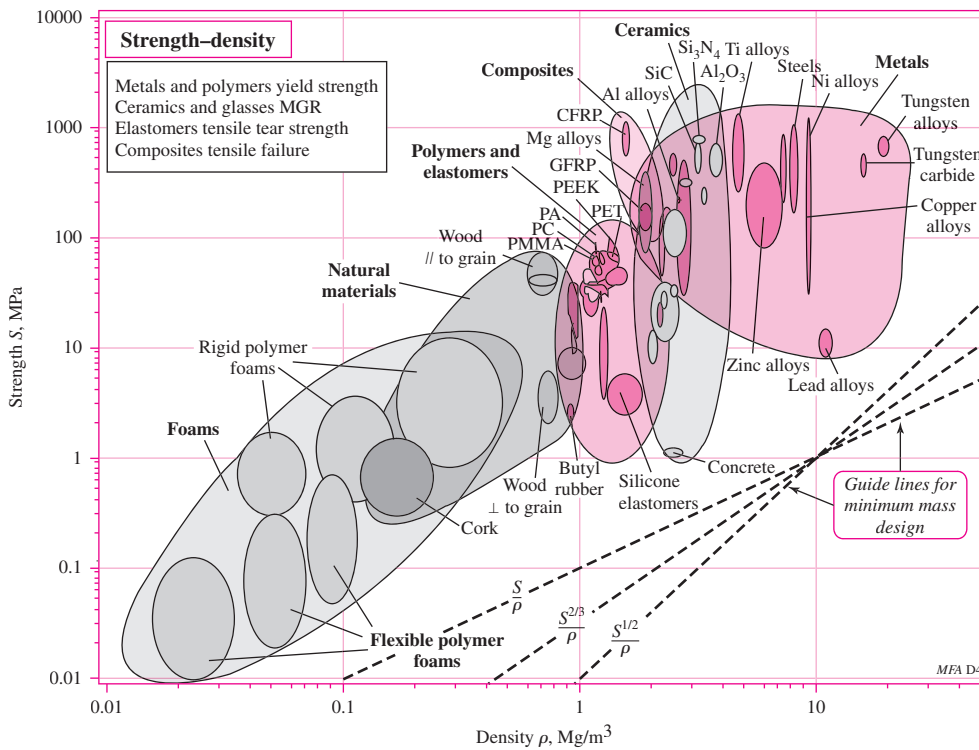


Figure 2-19

Strength S versus density ρ for various materials. For metals, S is the 0.2 percent offset yield strength. For polymers, S is the 1 percent yield strength. For ceramics and glasses, S is the compressive crushing strength. For composites, S is the tensile strength. For elastomers, S is the tensile strength. (Figure courtesy of Prof. Mike Ashby, Granta Design, Cambridge, U.K.)



Certainly, in a given design exercise, there will be other considerations such as strength, environment, and cost, and other charts may be necessary to investigate. For example, Fig. 2–19 represents strength versus density for the material families. Also, we have not brought in the material process selection part of the picture. If done properly, material selection can result in a good deal of bookkeeping. This is where software packages such as CES Edupack become very effective.

PROBLEMS

- 2–1** Determine the minimum tensile and yield strengths for SAE 1020 cold-drawn steel.
- 2–2** Determine the minimum tensile and yield strengths for UNS G10500 hot-rolled steel.
- 2–3** For the materials in Probs. 2–1 and 2–2, compare the following properties: minimum tensile and yield strengths, ductility, and stiffness.
- 2–4** Assuming you were specifying an AISI 1040 steel for an application where you desired to maximize the yield strength, how would you specify it?
- 2–5** Assuming you were specifying an AISI 1040 steel for an application where you desired to maximize the ductility, how would you specify it?
- 2–6** Determine the yield strength-to-weight density ratios (called *specific strength*) in units of inches for UNS G10350 hot-rolled steel, 2024-T4 aluminum, Ti-6Al-4V titanium alloy, and ASTM No. 30 gray cast iron.
- 2–7** Determine the stiffness-to-weight density ratios (called *specific modulus*) in units of inches for UNS G10350 hot-rolled steel, 2024-T4 aluminum, Ti-6Al-4V titanium alloy, and ASTM No. 30 gray cast iron.
- 2–8** *Poisson's ratio* ν is a material property and is the ratio of the lateral strain and the longitudinal strain for a member in tension. For a homogeneous, isotropic material, the modulus of rigidity G is related to Young's modulus as

$$G = \frac{E}{2(1 + \nu)}$$

Using the tabulated values of G and E , determine Poisson's ratio for steel, aluminum, beryllium copper, and gray cast iron.

- 2–9** A specimen of medium-carbon steel having an initial diameter of 0.503 in was tested in tension using a gauge length of 2 in. The following data were obtained for the elastic and plastic states:

Elastic State		Plastic State	
Load P , lbf	Elongation, in	Load P , lbf	Area A_i , in ²
1 000	0.0004	8 800	0.1984
2 000	0.0006	9 200	0.1978
3 000	0.0010	9 100	0.1963
4 000	0.0013	13 200	0.1924
7 000	0.0023	15 200	0.1875
8 400	0.0028	17 000	0.1563
8 800	0.0036	16 400	0.1307
9 200	0.0089	14 800	0.1077

Note that there is some overlap in the data. Plot the engineering or nominal stress-strain diagram using two scales for the unit strain ϵ , one from zero to about 0.02 in/in and the other from zero to maximum strain. From this diagram find the modulus of elasticity, the 0.2 percent offset yield strength, the ultimate strength, and the percent reduction in area.

2-10 Compute the true stress and the logarithmic strain using the data of Prob. 2-9 and plot the results on log-log paper. Then find the plastic strength coefficient σ_0 and the strain-strengthening exponent m . Find also the yield strength and the ultimate strength after the specimen has had 20 percent cold work.

2-11 The stress-strain data from a tensile test on a cast-iron specimen are

Engineering stress, kpsi	5	10	16	19	26	32	40	46	49	54
Engineering strain, $\epsilon \cdot 10^{-3}$ in/in	0.20	0.44	0.80	1.0	1.5	2.0	2.8	3.4	4.0	5.0

Plot the stress-strain locus and find the 0.1 percent offset yield strength, and the tangent modulus of elasticity at zero stress and at 20 kpsi.

2-12 A straight bar of arbitrary cross section and thickness h is cold-formed to an inner radius R about an anvil as shown in the figure. Some surface at distance N having an original length L_{AB} will remain unchanged in length after bending. This length is

$$L_{AB} = L_{AB'} = \frac{\pi(R + N)}{2}$$

The lengths of the outer and inner surfaces, after bending, are

$$L_o = \frac{\pi}{2}(R + h) \quad L_i = \frac{\pi}{2}R$$

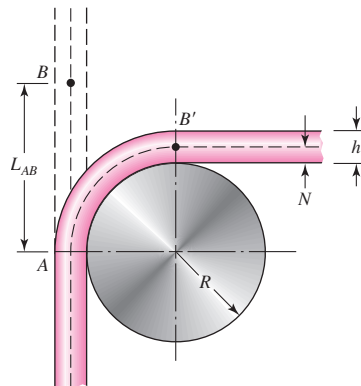
Using Eq. (2-4), we then find the true strains to be

$$\epsilon_o = \ln \frac{R + h}{R + N} \quad \epsilon_i = \ln \frac{R}{R + N}$$

Tests show that $|\epsilon_o| = |\epsilon_i|$. Show that

$$N = R \left[\left(1 + \frac{h}{R} \right)^{1/2} - 1 \right]$$

Problem 2-12



and

$$\varepsilon_o = \ln \left(1 + \frac{h}{R} \right)^{1/2}$$

- 2-13** A hot-rolled AISI 1212 steel is given 20 percent cold work. Determine the new values of the yield and ultimate strengths.
- 2-14** A steel member has a Brinell of $H_B = 250$. Estimate the ultimate strength of the steel in MPa.
- 2-15** Brinell hardness tests were made on a random sample of 10 steel parts during processing. The results were H_B values of 252 (2), 260, 254, 257 (2), 249 (3), and 251. Estimate the mean and standard deviation of the ultimate strength in kpsi.
- 2-16** Repeat Prob. 2-15 assuming the material to be cast iron.
- 2-17** *Toughness* is a term that relates to both strength and ductility. The fracture toughness, for example, is defined as the total area under the stress-strain curve to fracture, $u_T = \int_0^{\epsilon_f} \sigma d\epsilon$. This area, called the *modulus of toughness*, is the strain energy per unit volume required to cause the material to fracture. A similar term, but defined within the elastic limit of the material, is called the *modulus of resilience*, $u_R = \int_0^{\epsilon_y} \sigma d\epsilon$, where ϵ_y is the strain at yield. If the stress-strain is linear to $\sigma = S_y$, then it can be shown that $u_R = S_y^2/2E$.
- For the material in Prob. 2-9: (a) Determine the modulus of resilience, and (b) Estimate the modulus of toughness, assuming that the last data point corresponds to fracture.
- 2-18** What is the material composition of AISI 4340 steel?
- 2-19** Search the website noted in Sec. 2-20 and report your findings.
- 2-20** Research the material Inconel, briefly described in Table A-5. Compare it to various carbon and alloy steels in stiffness, strength, ductility, and toughness. What makes this material so special?
- 2-21** Pick a specific material given in the tables (e.g., 2024-T4 aluminum, SAE 1040 steel), and consult a local or regional distributor (consulting either the Yellow Pages or the Thomas Register) to obtain as much information as you can about cost and availability of the material and in what form (bar, plate, etc.).
- 2-22** Consider a tie rod transmitting a tensile force F . The corresponding tensile stress is given by $\sigma = F/A$, where A is the area of the cross section. The deflection of the rod is given by Eq. (4-3), which is $\delta = (Fl)/(AE)$, where l is the length of the rod. Using the Ashby charts of Figs. 2-16 and 2-19, explore what ductile materials are best suited for a light, stiff, and strong tie rod. *Hints:* Consider stiffness and strength separately. For use of Fig. 2-16, prove that $\beta = 1$. For use of Fig. 2-19, relate the applied tensile stress to the material strength.

3

Load and Stress Analysis

Chapter Outline

- 3-1** Equilibrium and Free-Body Diagrams **68**
- 3-2** Shear Force and Bending Moments in Beams **71**
- 3-3** Singularity Functions **73**
- 3-4** Stress **75**
- 3-5** Cartesian Stress Components **75**
- 3-6** Mohr's Circle for Plane Stress **76**
- 3-7** General Three-Dimensional Stress **82**
- 3-8** Elastic Strain **83**
- 3-9** Uniformly Distributed Stresses **84**
- 3-10** Normal Stresses for Beams in Bending **85**
- 3-11** Shear Stresses for Beams in Bending **90**
- 3-12** Torsion **95**
- 3-13** Stress Concentration **105**
- 3-14** Stresses in Pressurized Cylinders **107**
- 3-15** Stresses in Rotating Rings **110**
- 3-16** Press and Shrink Fits **110**
- 3-17** Temperature Effects **111**
- 3-18** Curved Beams in Bending **112**
- 3-19** Contact Stresses **117**
- 3-20** Summary **121**

One of the main objectives of this book is to describe how specific machine components function and how to design or specify them so that they function safely without failing structurally. Although earlier discussion has described structural strength in terms of load or stress versus strength, failure of function for structural reasons may arise from other factors such as excessive deformations or deflections.

Here it is assumed that the reader has completed basic courses in statics of rigid bodies and mechanics of materials and is quite familiar with the analysis of loads, and the stresses and deformations associated with the basic load states of simple prismatic elements. In this chapter and Chap. 4 we will review and extend these topics briefly. Complete derivations will not be presented here, and the reader is urged to return to basic textbooks and notes on these subjects.

This chapter begins with a review of equilibrium and free-body diagrams associated with load-carrying components. One must understand the nature of forces before attempting to perform an extensive stress or deflection analysis of a mechanical component. An extremely useful tool in handling discontinuous loading of structures employs *Macaulay* or *singularity functions*. Singularity functions are described in Sec. 3–3 as applied to the shear forces and bending moments in beams. In Chap. 4, the use of singularity functions will be expanded to show their real power in handling deflections of complex geometry and statically indeterminate problems.

Machine components transmit forces and motion from one point to another. The transmission of force can be envisioned as a flow or force distribution that can be further visualized by isolating internal surfaces within the component. Force distributed over a surface leads to the concept of stress, stress components, and stress transformations (Mohr's circle) for all possible surfaces at a point.

The remainder of the chapter is devoted to the stresses associated with the basic loading of prismatic elements, such as uniform loading, bending, and torsion, and topics with major design ramifications such as stress concentrations, thin- and thick-walled pressurized cylinders, rotating rings, press and shrink fits, thermal stresses, curved beams, and contact stresses.

3–1 Equilibrium and Free-Body Diagrams

Equilibrium

The word *system* will be used to denote any *isolated* part or portion of a machine or structure—including all of it if desired—that we wish to study. A system, under this definition, may consist of a particle, several particles, a part of a rigid body, an entire rigid body, or even several rigid bodies.

If we assume that the system to be studied is motionless or, at most, has constant velocity, then the system has zero acceleration. Under this condition the system is said to be in *equilibrium*. The phrase *static equilibrium* is also used to imply that the system is *at rest*. For equilibrium, the forces and moments acting on the system balance such that

$$\sum \mathbf{F} = 0 \quad (3-1)$$

$$\sum \mathbf{M} = 0 \quad (3-2)$$

which states that *the sum of all force and the sum of all moment vectors* acting upon a system in equilibrium is zero.

Free-Body Diagrams

We can greatly simplify the analysis of a very complex structure or machine by successively isolating each element and studying and analyzing it by the use of *free-body diagrams*. When all the members have been treated in this manner, the knowledge can be assembled to yield information concerning the behavior of the total system. Thus, free-body diagramming is essentially a means of breaking a complicated problem into manageable segments, analyzing these simple problems, and then, usually, putting the information together again.

Using free-body diagrams for force analysis serves the following important purposes:

- The diagram establishes the directions of reference axes, provides a place to record the dimensions of the subsystem and the magnitudes and directions of the known forces, and helps in assuming the directions of unknown forces.
- The diagram simplifies your thinking because it provides a place to store one thought while proceeding to the next.
- The diagram provides a means of communicating your thoughts clearly and unambiguously to other people.
- Careful and complete construction of the diagram clarifies fuzzy thinking by bringing out various points that are not always apparent in the statement or in the geometry of the total problem. Thus, the diagram aids in understanding all facets of the problem.
- The diagram helps in the planning of a logical attack on the problem and in setting up the mathematical relations.
- The diagram helps in recording progress in the solution and in illustrating the methods used.
- The diagram allows others to follow your reasoning, showing *all* forces.

EXAMPLE 3-1

Figure 3-1*a* shows a simplified rendition of a gear reducer where the input and output shafts AB and CD are rotating at constant speeds ω_i and ω_o , respectively. The input and output torques (torsional moments) are $T_i = 240 \text{ lbf} \cdot \text{in}$ and T_o , respectively. The shafts are supported in the housing by bearings at A , B , C , and D . The pitch radii of gears G_1 and G_2 are $r_1 = 0.75 \text{ in}$ and $r_2 = 1.5 \text{ in}$, respectively. Draw the free-body diagrams of each member and determine the net reaction forces and moments at all points.

Solution

First, we will list all simplifying assumptions.

- 1 Gears G_1 and G_2 are simple spur gears with a standard pressure angle $\phi = 20^\circ$ (see Sec. 13-5).
- 2 The bearings are self-aligning and the shafts can be considered to be simply supported.
- 3 The weight of each member is negligible.
- 4 Friction is negligible.
- 5 The mounting bolts at E , F , H , and I are the same size.

The separate free-body diagrams of the members are shown in Figs. 3-1*b-d*. Note that Newton's third law, called *the law of action and reaction*, is used extensively where each member mates. The force transmitted between the spur gears is not tangential but at the pressure angle ϕ . Thus, $N = F \tan \phi$.

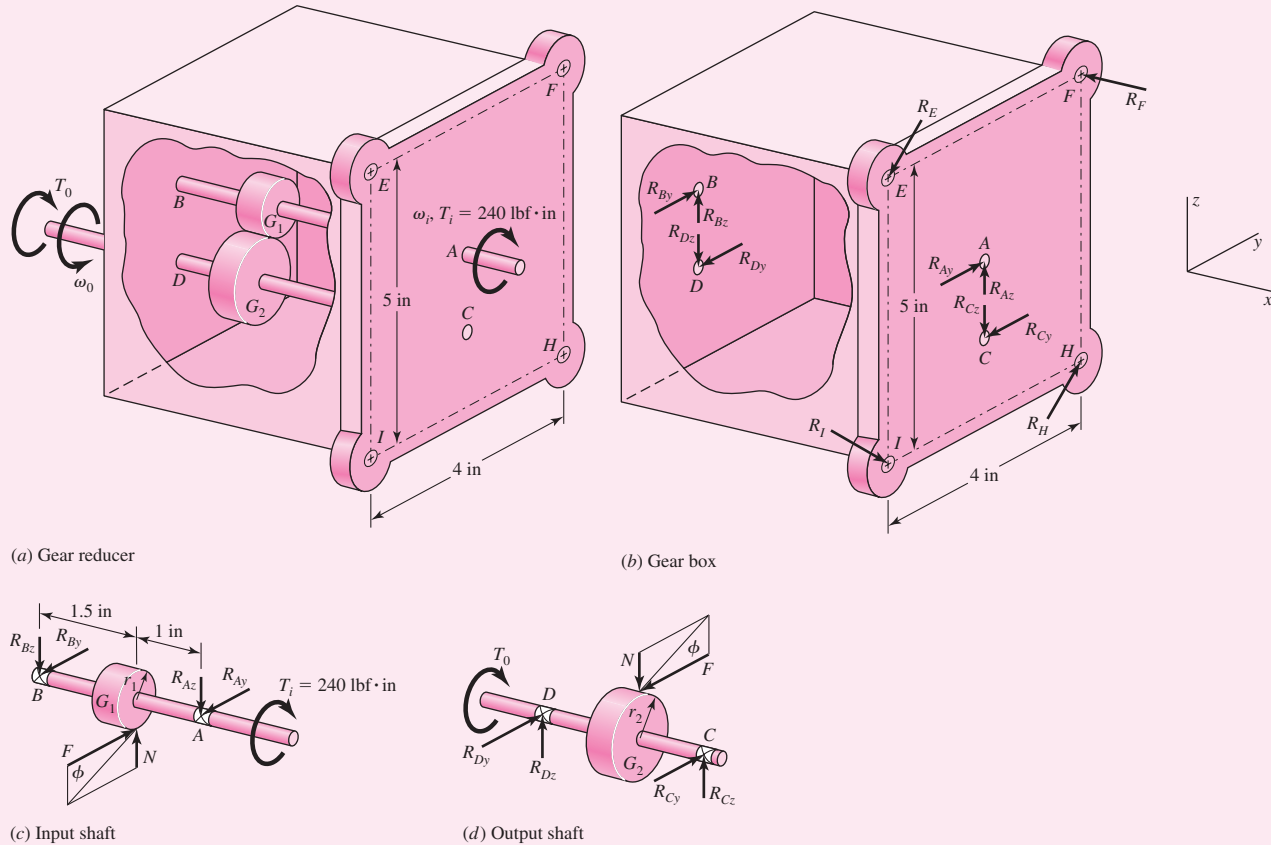


Figure 3-1

(a) Gear reducer; (b–d) free-body diagrams. Diagrams are not drawn to scale.

Summing moments about the x axis of shaft AB in Fig. 3-1d gives

$$\sum M_x = F(0.75) - 240 = 0$$

$$F = 320 \text{ lbf}$$

The normal force is $N = 320 \tan 20^\circ = 116.5 \text{ lbf}$.

Using the equilibrium equations for Figs. 3-1c and d, the reader should verify that: $R_{Ay} = 192 \text{ lbf}$, $R_{Az} = 69.9 \text{ lbf}$, $R_{By} = 128 \text{ lbf}$, $R_{Bz} = 46.6 \text{ lbf}$, $R_{Cy} = 192 \text{ lbf}$, $R_{Cz} = 69.9 \text{ lbf}$, $R_{Dy} = 128 \text{ lbf}$, $R_{Dz} = 46.6 \text{ lbf}$, and $T_o = 480 \text{ lbf} \cdot \text{in}$. The direction of the output torque T_o is opposite ω_o because it is the resistive load on the system opposing the motion ω_o .

Note in Fig. 3-1b the net force from the bearing reactions is zero whereas the net moment about the x axis is $2.25(192) + 2.25(128) = 720 \text{ lbf} \cdot \text{in}$. This value is the same as $T_i + T_o = 240 + 480 = 720 \text{ lbf} \cdot \text{in}$, as shown in Fig. 3-1a. The reaction forces R_E , R_F , R_H , and R_I , from the mounting bolts cannot be determined from the equilibrium equations as there are too many unknowns. Only three equations are available, $\sum F_y = \sum F_z = \sum M_x = 0$. In case you were wondering about assumption 5, here is where we will use it (see Sec. 8-12). The gear box tends to rotate about the x axis because of a pure torsional moment of $720 \text{ lbf} \cdot \text{in}$. The bolt forces must provide

an equal but opposite torsional moment. The center of rotation relative to the bolts lies at the centroid of the bolt cross-sectional areas. Thus if the bolt areas are equal: the center of rotation is at the center of the four bolts, a distance of $\sqrt{(4/2)^2 + (5/2)^2} = 3.202$ in from each bolt; the bolt forces are equal ($R_E = R_F = R_H = R_I = R$), and each bolt force is perpendicular to the line from the bolt to the center of rotation. This gives a net torque from the four bolts of $4R(3.202) = 720$. Thus, $R_E = R_F = R_H = R_I = 56.22$ lbf.

3-2 Shear Force and Bending Moments in Beams

Figure 3-2a shows a beam supported by reactions R_1 and R_2 and loaded by the concentrated forces F_1 , F_2 , and F_3 . If the beam is cut at some section located at $x = x_1$ and the left-hand portion is removed as a free body, an *internal shear force* V and *bending moment* M must act on the cut surface to ensure equilibrium (see Fig. 3-2b). The shear force is obtained by summing the forces on the isolated section. The bending moment is the sum of the moments of the forces to the left of the section taken about an axis through the isolated section. The sign conventions used for bending moment and shear force in this book are shown in Fig. 3-3. Shear force and bending moment are related by the equation

$$V = \frac{dM}{dx} \quad (3-3)$$

Sometimes the bending is caused by a distributed load $q(x)$, as shown in Fig. 3-4; $q(x)$ is called the *load intensity* with units of force per unit length and is positive in the

Figure 3-2

Free-body diagram of simply-supported beam with V and M shown in positive directions.

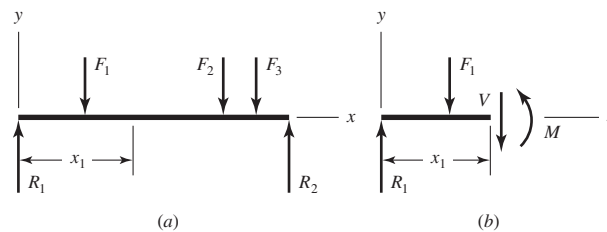


Figure 3-3

Sign conventions for bending and shear.

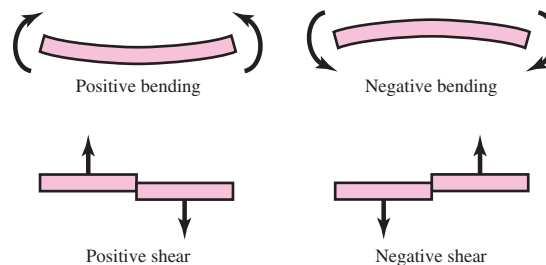
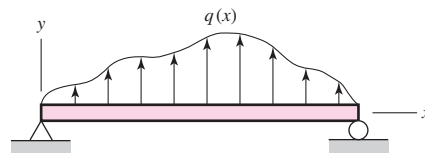


Figure 3-4

Distributed load on beam.



positive y direction. It can be shown that differentiating Eq. (3–3) results in

$$\frac{dV}{dx} = \frac{d^2M}{dx^2} = q \quad (3-4)$$

Normally the applied distributed load is directed downward and labeled w (e.g., see Fig. 3–6). In this case, $w = -q$.

Equations (3–3) and (3–4) reveal additional relations if they are integrated. Thus, if we integrate between, say, x_A and x_B , we obtain

$$\int_{V_A}^{V_B} dV = \int_{x_A}^{x_B} q dx = V_B - V_A \quad (3-5)$$

which states that *the change in shear force from A to B is equal to the area of the load–ing diagram between x_A and x_B .*

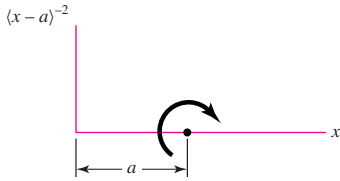
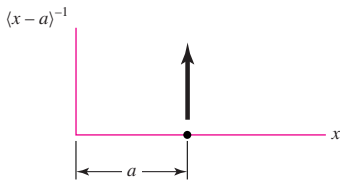
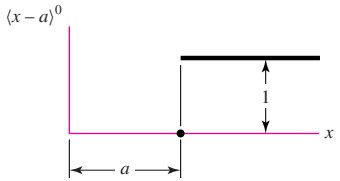
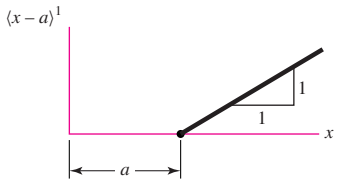
In a similar manner,

$$\int_{M_A}^{M_B} dM = \int_{x_A}^{x_B} V dx = M_B - M_A \quad (3-6)$$

which states that *the change in moment from A to B is equal to the area of the shear–force diagram between x_A and x_B .*

Table 3–1

Singularity (Macaulay[†])
Functions

Function	Graph of $f_n(x)$	Meaning
Concentrated moment (unit doublet)		$\langle x-a \rangle^{-2} = 0 \quad x \neq a$ $\langle x-a \rangle^{-2} = \pm\infty \quad x = a$ $\int \langle x-a \rangle^{-2} dx = \langle x-a \rangle^{-1}$
Concentrated force (unit impulse)		$\langle x-a \rangle^{-1} = 0 \quad x \neq a$ $\langle x-a \rangle^{-1} = +\infty \quad x = a$ $\int \langle x-a \rangle^{-1} dx = \langle x-a \rangle^0$
Unit step		$\langle x-a \rangle^0 = \begin{cases} 0 & x < a \\ 1 & x \geq a \end{cases}$ $\int \langle x-a \rangle^0 dx = \langle x-a \rangle^1$
Ramp		$\langle x-a \rangle^1 = \begin{cases} 0 & x < a \\ x-a & x \geq a \end{cases}$ $\int \langle x-a \rangle^1 dx = \frac{\langle x-a \rangle^2}{2}$

[†]W. H. Macaulay, “Note on the deflection of beams,” *Messenger of Mathematics*, vol. 48, pp. 129–130, 1919.

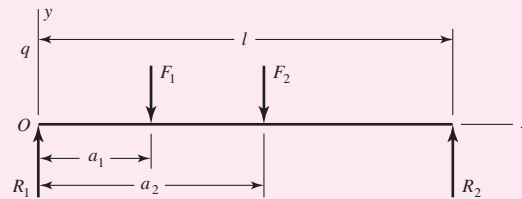
3–3 Singularity Functions

The four singularity functions defined in Table 3–1 constitute a useful and easy means of integrating across discontinuities. By their use, general expressions for shear force and bending moment in beams can be written when the beam is loaded by concentrated moments or forces. As shown in the table, the concentrated moment and force functions are zero for all values of x not equal to a . The functions are undefined for values of $x = a$. Note that the unit step and ramp functions are zero only for values of x that are less than a . The integration properties shown in the table constitute a part of the mathematical definition too. The first two integrations of $q(x)$ for $V(x)$ and $M(x)$ do not require constants of integration provided *all* loads on the beam are accounted for in $q(x)$. The examples that follow show how these functions are used.

EXAMPLE 3–2

Derive expressions for the loading, shear-force, and bending-moment diagrams for the beam of Fig. 3–5.

Figure 3–5



Solution Using Table 3–1 and $q(x)$ for the loading function, we find

$$\text{Answer} \quad q = R_1 \langle x \rangle^{-1} - F_1 \langle x - a_1 \rangle^{-1} - F_2 \langle x - a_2 \rangle^{-1} + R_2 \langle x - l \rangle^{-1} \quad (1)$$

Next, we use Eq. (3–5) to get the shear force.

$$\text{Answer} \quad V = \int q \, dx = R_1 \langle x \rangle^0 - F_1 \langle x - a_1 \rangle^0 - F_2 \langle x - a_2 \rangle^0 + R_2 \langle x - l \rangle^0 \quad (2)$$

Note that $V = 0$ at $x = 0^-$.

A second integration, in accordance with Eq. (3–6), yields

$$\text{Answer} \quad M = \int V \, dx = R_1 \langle x \rangle^1 - F_1 \langle x - a_1 \rangle^1 - F_2 \langle x - a_2 \rangle^1 + R_2 \langle x - l \rangle^1 \quad (3)$$

The reactions R_1 and R_2 can be found by taking a summation of moments and forces as usual, *or* they can be found by noting that the shear force and bending moment must be zero everywhere except in the region $0 \leq x \leq l$. This means that Eq. (2) should give $V = 0$ at x slightly larger than l . Thus

$$R_1 - F_1 - F_2 + R_2 = 0 \quad (4)$$

Since the bending moment should also be zero in the same region, we have, from Eq. (3),

$$R_1 l - F_1(l - a_1) - F_2(l - a_2) = 0 \quad (5)$$

Equations (4) and (5) can now be solved for the reactions R_1 and R_2 .

EXAMPLE 3-3

Figure 3-6a shows the loading diagram for a beam cantilevered at A with a uniform load of 20 lbf/in acting on the portion $3 \text{ in} \leq x \leq 7 \text{ in}$, and a concentrated counter-clockwise moment of 240 lbf · in at $x = 10 \text{ in}$. Derive the shear-force and bending-moment relations, and the support reactions M_1 and R_1 .

Solution Following the procedure of Example 3-2, we find the load intensity function to be

$$q = -M_1 \langle x \rangle^{-2} + R_1 \langle x \rangle^{-1} - 20 \langle x - 3 \rangle^0 + 20 \langle x - 7 \rangle^0 - 240 \langle x - 10 \rangle^{-1} \quad (1)$$

Note that the $20 \langle x - 7 \rangle^0$ term was necessary to “turn off” the uniform load at C. Integrating successively gives

$$V = -M_1 \langle x \rangle^{-1} + R_1 \langle x \rangle^0 - 20 \langle x - 3 \rangle^1 + 20 \langle x - 7 \rangle^1 - 240 \langle x - 10 \rangle^{-1} \quad (2)$$

$$M = -M_1 \langle x \rangle^0 + R_1 \langle x \rangle^1 - 10 \langle x - 3 \rangle^2 + 10 \langle x - 7 \rangle^2 - 240 \langle x - 10 \rangle^0 \quad (3)$$

The reactions are found by making x slightly larger than 10 in, where both V and M are zero in this region. Equation (2) will then give

$$-M_1(0) + R_1(1) - 20(10 - 3) + 20(10 - 7) - 240(0) = 0$$

Answer which yields $R_1 = 80 \text{ lbf}$.

From Eq. (3) we get

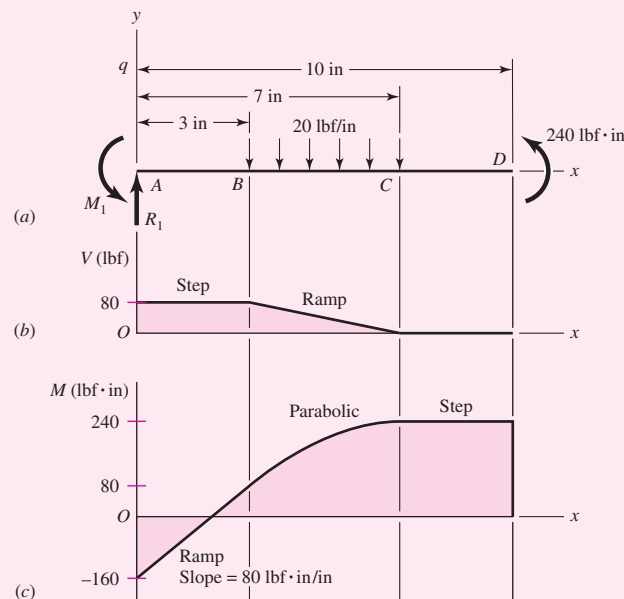
$$-M_1(1) + 80(10) - 10(10 - 3)^2 + 10(10 - 7)^2 - 240(1) = 0$$

Answer which yields $M_1 = 160 \text{ lbf} \cdot \text{in}$.

Figures 3-6b and c show the shear-force and bending-moment diagrams. Note that the impulse terms in Eq. (2), $-M_1 \langle x \rangle^{-1}$ and $-240 \langle x - 10 \rangle^{-1}$, are physically not forces

Figure 3-6

- (a) Loading diagram for a beam cantilevered at A.
- (b) Shear-force diagram.
- (c) Bending-moment diagram.



and are not shown in the V diagram. Also note that both the M_1 and $240 \text{ lbf} \cdot \text{in}$ moments are counterclockwise and negative singularity functions; however, by the convention shown in Fig. 3–2 the M_1 and $240 \text{ lbf} \cdot \text{in}$ are negative and positive bending moments, respectively, which is reflected in Fig. 3–6c.

3–4 Stress

When an internal surface is isolated as in Fig. 3–2b, the net force and moment acting on the surface manifest themselves as force distributions across the entire area. The force distribution acting at a point on the surface is unique and will have components in the normal and tangential directions called *normal stress* and *tangential shear stress*, respectively. Normal and shear stresses are labeled by the Greek symbols σ and τ , respectively. If the direction of σ is outward from the surface it is considered to be a *tensile stress* and is a positive normal stress. If σ is into the surface it is a *compressive stress* and commonly considered to be a negative quantity. The units of stress in U.S. Customary units are pounds per square inch (psi). For SI units, stress is in newtons per square meter (N/m^2); $1 \text{ N}/\text{m}^2 = 1 \text{ pascal (Pa)}$.

3–5 Cartesian Stress Components

The Cartesian stress components are established by defining three mutually orthogonal surfaces at a point within the body. The normals to each surface will establish the x , y , z Cartesian axes. In general, each surface will have a normal and shear stress. The shear stress may have components along two Cartesian axes. For example, Fig. 3–7 shows an infinitesimal surface area isolation at a point Q within a body where the surface normal is the x direction. The normal stress is labeled σ_x . The symbol σ indicates a normal stress and the subscript x indicates the direction of the surface normal. The net shear stress acting on the surface is $(\tau_x)_{\text{net}}$ which can be resolved into components in the y and z directions, labeled as τ_{xy} and τ_{xz} , respectively (see Fig. 3–7). Note that double subscripts are necessary for the shear. The first subscript indicates the direction of the surface normal whereas the second subscript is the direction of the shear stress.

The state of stress at a point described by three mutually perpendicular surfaces is shown in Fig. 3–8a. It can be shown through coordinate transformation that this is sufficient to determine the state of stress on *any* surface intersecting the point. As the

Figure 3–7

Stress components on surface normal to x direction.

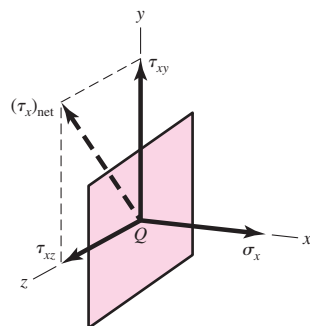
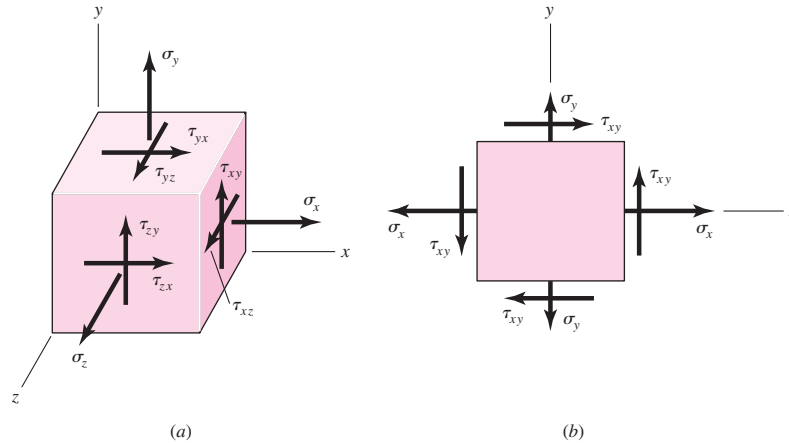


Figure 3–8

(a) General three-dimensional stress. (b) Plane stress with “cross-shears” equal.



dimensions of the cube in Fig. 3–8a approach zero, the stresses on the hidden faces become equal and opposite to those on the opposing visible faces. Thus, in general, a complete state of stress is defined by nine stress components, σ_x , σ_y , σ_z , τ_{xy} , τ_{xz} , τ_{yx} , τ_{yz} , τ_{zx} , and τ_{zy} .

For equilibrium, in most cases, “cross-shears” are equal, hence

$$\tau_{yx} = \tau_{xy} \quad \tau_{zy} = \tau_{yz} \quad \tau_{xz} = \tau_{zx} \quad (3-7)$$

This reduces the number of stress components for most three-dimensional states of stress from nine to six quantities, σ_x , σ_y , σ_z , τ_{xy} , τ_{yz} , and τ_{zx} .

A very common state of stress occurs when the stresses on one surface are zero. When this occurs the state of stress is called *plane stress*. Figure 3–8b shows a state of plane stress, arbitrarily assuming that the normal for the stress-free surface is the z direction such that $\sigma_z = \tau_{zx} = \tau_{zy} = 0$. It is important to note that the element in Fig. 3–8b is still a three-dimensional cube. Also, here it is assumed that the cross-shears are equal such that $\tau_{yx} = \tau_{xy}$, and $\tau_{yz} = \tau_{zy} = \tau_{xz} = \tau_{zx} = 0$.

3–6 Mohr’s Circle for Plane Stress

Suppose the $dx \, dy \, dz$ element of Fig. 3–8b is cut by an oblique plane with a normal n at an arbitrary angle ϕ counterclockwise from the x axis as shown in Fig. 3–9. This section is concerned with the stresses σ and τ that act upon this oblique plane. By summing the forces caused by all the stress components to zero, the stresses σ and τ are found to be

$$\sigma = \frac{\sigma_x + \sigma_y}{2} + \frac{\sigma_x - \sigma_y}{2} \cos 2\phi + \tau_{xy} \sin 2\phi \quad (3-8)$$

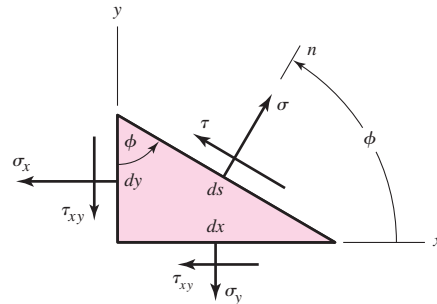
$$\tau = -\frac{\sigma_x - \sigma_y}{2} \sin 2\phi + \tau_{xy} \cos 2\phi \quad (3-9)$$

Equations (3–8) and (3–9) are called the *plane-stress transformation equations*.

Differentiating Eq. (3–8) with respect to ϕ and setting the result equal to zero gives

$$\tan 2\phi_p = \frac{2\tau_{xy}}{\sigma_x - \sigma_y} \quad (3-10)$$

| Figure 3–9



Equation (3–10) defines two particular values for the angle $2\phi_p$, one of which defines the maximum normal stress σ_1 and the other, the minimum normal stress σ_2 . These two stresses are called the *principal stresses*, and their corresponding directions, the *principal directions*. The angle between the principal directions is 90° . It is important to note that Eq. (3–10) can be written in the form

$$\frac{\sigma_x - \sigma_y}{2} \sin 2\phi_p - \tau_{xy} \cos 2\phi_p = 0 \quad (a)$$

Comparing this with Eq. (3–9), we see that $\tau = 0$, meaning that the *surfaces containing principal stresses have zero shear stresses*.

In a similar manner, we differentiate Eq. (3–9), set the result equal to zero, and obtain

$$\tan 2\phi_s = -\frac{\sigma_x - \sigma_y}{2\tau_{xy}} \quad (3-11)$$

Equation (3–11) defines the two values of $2\phi_s$ at which the shear stress τ reaches an extreme value. The angle between the surfaces containing the maximum shear stresses is 90° . Equation (3–1) can also be written as

$$\frac{\sigma_x - \sigma_y}{2} \cos 2\phi_p + \tau_{xy} \sin 2\phi_p = 0 \quad (b)$$

Substituting this into Eq. (3–8) yields

$$\sigma = \frac{\sigma_x + \sigma_y}{2} \quad (3-12)$$

Equation (3–12) tells us that the two surfaces containing the maximum shear stresses also contain equal normal stresses of $(\sigma_x + \sigma_y)/2$.

Comparing Eqs. (3–10) and (3–11), we see that $\tan 2\phi_s$ is the negative reciprocal of $\tan 2\phi_p$. This means that $2\phi_s$ and $2\phi_p$ are angles 90° apart, and thus the angles between the surfaces containing the maximum shear stresses and the surfaces containing the principal stresses are $\pm 45^\circ$.

Formulas for the two principal stresses can be obtained by substituting the angle $2\phi_p$ from Eq. (3–10) in Eq. (3–8). The result is

$$\sigma_1, \sigma_2 = \frac{\sigma_x + \sigma_y}{2} \pm \sqrt{\left(\frac{\sigma_x - \sigma_y}{2}\right)^2 + \tau_{xy}^2} \quad (3-13)$$

In a similar manner the two extreme-value shear stresses are found to be

$$\tau_1, \tau_2 = \pm \sqrt{\left(\frac{\sigma_x - \sigma_y}{2}\right)^2 + \tau_{xy}^2} \quad (3-14)$$

Your particular attention is called to the fact that an extreme value of the shear stress *may not be the same as the actual maximum value*. See Sec. 3–7.

It is important to note that the equations given to this point are quite sufficient for performing any plane stress transformation. However, extreme care must be exercised when applying them. For example, say you are attempting to determine the principal state of stress for a problem where $\sigma_x = 14$ MPa, $\sigma_y = -10$ MPa, and $\tau_{xy} = -16$ MPa. Equation (3–10) yields $\phi_p = -26.57^\circ$ and 63.43° to locate the principal stress surfaces, whereas, Eq. (3–13) gives $\sigma_1 = 22$ MPa and $\sigma_2 = -18$ MPa for the principal stresses. If all we wanted was the principal stresses, we would be finished. However, what if we wanted to draw the element containing the principal stresses properly oriented relative to the x, y axes? Well, we have two values of ϕ_p and two values for the principal stresses. How do we know which value of ϕ_p corresponds to which value of the principal stress? To clear this up we would need to substitute one of the values of ϕ_p into Eq. (3–8) to determine the normal stress corresponding to that angle.

A graphical method for expressing the relations developed in this section, called *Mohr's circle diagram*, is a very effective means of visualizing the stress state at a point and keeping track of the directions of the various components associated with plane stress. Equations (3–8) and (3–9) can be shown to be a set of parametric equations for σ and τ , where the parameter is 2ϕ . The relationship between σ and τ is that of a circle plotted in the σ, τ plane, where the center of the circle is located at $C = (\sigma, \tau) = [(\sigma_x + \sigma_y)/2, 0]$ and has a radius of $R = \sqrt{[(\sigma_x - \sigma_y)/2]^2 + \tau_{xy}^2}$. A problem arises in the sign of the shear stress. The transformation equations are based on a positive ϕ being counterclockwise, as shown in Fig. 3–9. If a positive τ were plotted above the σ axis, points would rotate clockwise on the circle 2ϕ in the opposite direction of rotation on the element. It would be convenient if the rotations were in the same direction. One could solve the problem easily by plotting positive τ below the axis. However, the classical approach to Mohr's circle uses a different convention for the shear stress.

Mohr's Circle Shear Convention

This convention is followed in drawing Mohr's circle:

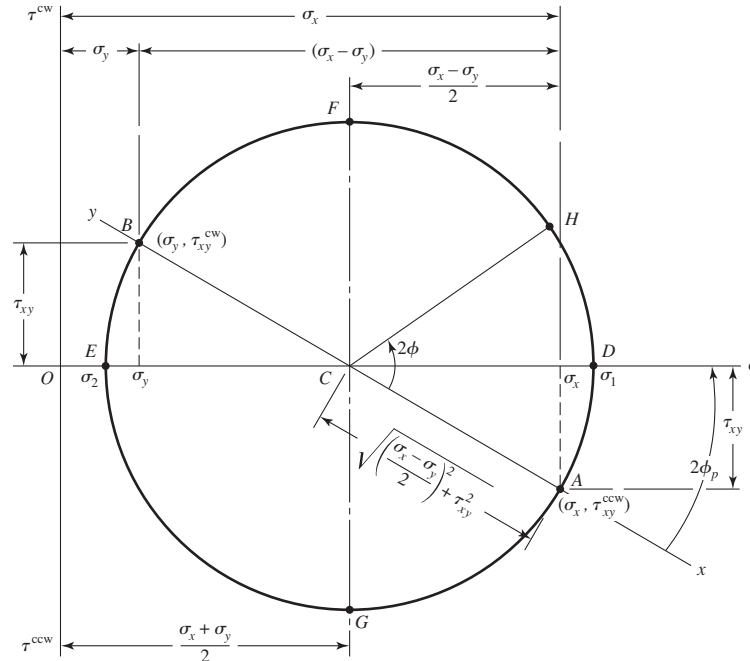
- Shear stresses tending to rotate the element clockwise (cw) are plotted *above* the σ axis.
- Shear stresses tending to rotate the element counterclockwise (ccw) are plotted *below* the σ axis.

For example, consider the right face of the element in Fig. 3–8*b*. By Mohr's circle convention the shear stress shown is plotted *below* the σ axis because it tends to rotate the element counterclockwise. The shear stress on the top face of the element is plotted *above* the σ axis because it tends to rotate the element clockwise.

In Fig. 3–10 we create a coordinate system with normal stresses plotted along the abscissa and shear stresses plotted as the ordinates. On the abscissa, tensile (positive) normal stresses are plotted to the right of the origin O and compressive (negative) normal stresses to the left. On the ordinate, clockwise (cw) shear stresses are plotted up; counterclockwise (ccw) shear stresses are plotted down.

Figure 3-10

Mohr's circle diagram.



Using the stress state of Fig. 3–8*b*, we plot Mohr's circle, Fig. 3–10, by first looking at the right surface of the element containing σ_x to establish the sign of σ_x and the cw or ccw direction of the shear stress. The right face is called the *x face* where $\phi = 0^\circ$. If σ_x is positive and the shear stress τ_{xy} is ccw as shown in Fig. 3–8*b*, we can establish point A with coordinates $(\sigma_x, \tau_{xy}^{ccw})$ in Fig. 3–10. Next, we look at the top *y face*, where $\phi = 90^\circ$, which contains σ_y , and repeat the process to obtain point B with coordinates $(\sigma_y, \tau_{xy}^{cw})$ as shown in Fig. 3–10. The two states of stress for the element are $\Delta\phi = 90^\circ$ from each other on the element so they will be $2\Delta\phi = 180^\circ$ from each other on Mohr's circle. Points A and B are the same vertical distance from the σ axis. Thus, AB must be on the diameter of the circle, and the center of the circle C is where AB intersects the σ axis. With points A and B on the circle, and center C , the complete circle can then be drawn. Note that the extended ends of line AB are labeled x and y as references to the normals to the surfaces for which points A and B represent the stresses.

The entire Mohr's circle represents the state of stress at a *single* point in a structure. Each point on the circle represents the stress state for a *specific* surface intersecting the point in the structure. Each pair of points on the circle 180° apart represent the state of stress on an element whose surfaces are 90° apart. Once the circle is drawn, the states of stress can be visualized for various surfaces intersecting the point being analyzed. For example, the principal stresses σ_1 and σ_2 are points D and E , respectively, and their values obviously agree with Eq. (3–13). We also see that the shear stresses are zero on the surfaces containing σ_1 and σ_2 . The two extreme-value shear stresses, one clockwise and one counterclockwise, occur at F and G with magnitudes equal to the radius of the circle. The surfaces at F and G each also contain normal stresses of $(\sigma_x + \sigma_y)/2$ as noted earlier in Eq. (3–12). Finally, the state of stress on an arbitrary surface located at an angle ϕ counterclockwise from the x face is point H .

At one time, Mohr's circle was used graphically where it was drawn to scale very accurately and values were measured by using a scale and protractor. Here, we are strictly using Mohr's circle as a visualization aid and will use a semigraphical approach, calculating values from the properties of the circle. This is illustrated by the following example.

EXAMPLE 3-4

A stress element has $\sigma_x = 80$ MPa and $\tau_{xy} = 50$ MPa cw, as shown in Fig. 3-11a.

(a) Using Mohr's circle, find the principal stresses and directions, and show these on a stress element correctly aligned with respect to the xy coordinates. Draw another stress element to show τ_1 and τ_2 , find the corresponding normal stresses, and label the drawing completely.

(b) Repeat part *a* using the transformation equations only.

Solution

(a) In the semigraphical approach used here, we first make an approximate freehand sketch of Mohr's circle and then use the geometry of the figure to obtain the desired information.

Draw the σ and τ axes first (Fig. 3-11b) and from the x face locate $\sigma_x = 80$ MPa along the σ axis. On the x face of the element, we see that the shear stress is 50 MPa in the cw direction. Thus, for the x face, this establishes point A (80, 50^{cw}) MPa. Corresponding to the y face, the stress is $\sigma = 0$ and $\tau = 50$ MPa in the ccw direction. This locates point B (0, 50^{ccw}) MPa. The line AB forms the diameter of the required circle, which can now be drawn. The intersection of the circle with the σ axis defines σ_1 and σ_2 as shown. Now, noting the triangle ACD , indicate on the sketch the length of the legs AD and CD as 50 and 40 MPa, respectively. The length of the hypotenuse AC is

Answer

$$\tau_1 = \sqrt{(50)^2 + (40)^2} = 64.0 \text{ MPa}$$

and this should be labeled on the sketch too. Since intersection C is 40 MPa from the origin, the principal stresses are now found to be

Answer

$$\sigma_1 = 40 + 64 = 104 \text{ MPa} \quad \text{and} \quad \sigma_2 = 40 - 64 = -24 \text{ MPa}$$

The angle 2ϕ from the x axis cw to σ_1 is

Answer

$$2\phi_p = \tan^{-1} \frac{50}{40} = 51.3^\circ$$

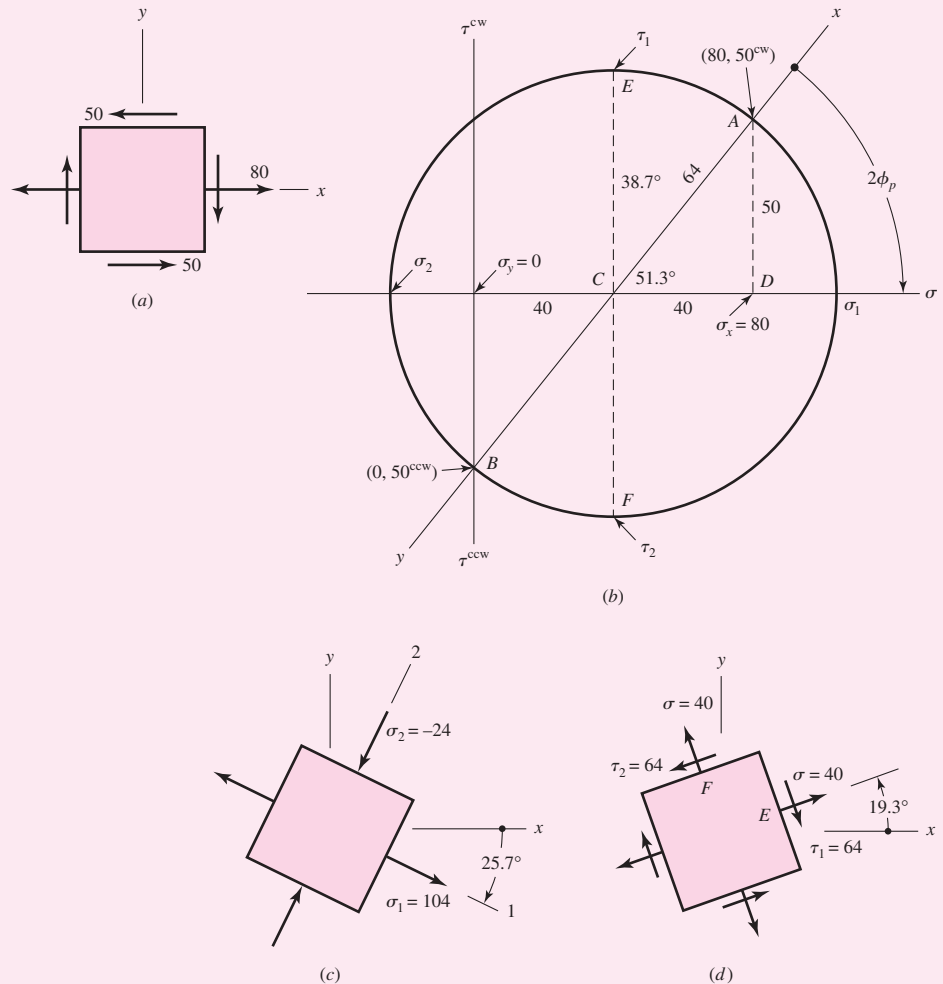
To draw the principal stress element (Fig. 3-11c), sketch the x and y axes parallel to the original axes. The angle ϕ_p on the stress element must be measured in the *same* direction as is the angle $2\phi_p$ on the Mohr circle. Thus, from x measure 25.7° (half of 51.3°) clockwise to locate the σ_1 axis. The σ_2 axis is 90° from the σ_1 axis and the stress element can now be completed and labeled as shown. Note that there are *no* shear stresses on this element.

The two maximum shear stresses occur at points E and F in Fig. 3-11b. The two normal stresses corresponding to these shear stresses are each 40 MPa, as indicated. Point E is 38.7° ccw from point A on Mohr's circle. Therefore, in Fig. 3-11d, draw a stress element oriented 19.3° (half of 38.7°) ccw from x . The element should then be labeled with magnitudes and directions as shown.

In constructing these stress elements it is important to indicate the x and y directions of the original reference system. This completes the link between the original machine element and the orientation of its principal stresses.

Figure 3-11

All stresses in MPa.

**Answer**

(b) The transformation equations are programmable. From Eq. (3-10),

$$\phi_p = \frac{1}{2} \tan^{-1} \left(\frac{2\tau_{xy}}{\sigma_x - \sigma_y} \right) = \frac{1}{2} \tan^{-1} \left(\frac{2(-50)}{80} \right) = -25.7^\circ, 64.3^\circ$$

From Eq. (3-8), for the first angle $\phi_p = -25.7^\circ$,

$$\sigma = \frac{80 + 0}{2} + \frac{80 - 0}{2} \cos[2(-25.7)] + (-50) \sin[2(-25.7)] = 104.03 \text{ MPa}$$

The shear on this surface is obtained from Eq. (3-9) as

$$\tau = -\frac{80 - 0}{2} \sin[2(-25.7)] + (-50) \cos[2(-25.7)] = 0 \text{ MPa}$$

which confirms that 104.03 MPa is a principal stress. From Eq. (3-8), for $\phi_p = 64.3^\circ$,

$$\sigma = \frac{80 + 0}{2} + \frac{80 - 0}{2} \cos[2(64.3)] + (-50) \sin[2(64.3)] = -24.03 \text{ MPa}$$

Answer Substituting $\phi_p = 64.3^\circ$ into Eq. (3–9) again yields $\tau = 0$, indicating that -24.03 MPa is also a principal stress. Once the principal stresses are calculated they can be ordered such that $\sigma_1 \geq \sigma_2$. Thus, $\sigma_1 = 104.03$ MPa and $\sigma_2 = -24.03$ MPa.

Since for $\sigma_1 = 104.03$ MPa, $\phi_p = -25.7^\circ$, and since ϕ is defined positive ccw in the transformation equations, we rotate *clockwise* 25.7° for the surface containing σ_1 . We see in Fig. 3–11c that this totally agrees with the semigraphical method.

To determine τ_1 and τ_2 , we first use Eq. (3–11) to calculate ϕ_s :

$$\phi_s = \frac{1}{2} \tan^{-1} \left(-\frac{\sigma_x - \sigma_y}{2\tau_{xy}} \right) = \frac{1}{2} \tan^{-1} \left(-\frac{80}{2(-50)} \right) = 19.3^\circ, 109.3^\circ$$

For $\phi_s = 19.3^\circ$, Eqs. (3–8) and (3–9) yield

Answer
$$\sigma = \frac{80 + 0}{2} + \frac{80 - 0}{2} \cos[2(19.3)] + (-50) \sin[2(19.3)] = 40.0 \text{ MPa}$$

$$\tau = -\frac{80 - 0}{2} \sin[2(19.3)] + (-50) \cos[2(19.3)] = -64.0 \text{ MPa}$$

Remember that Eqs. (3–8) and (3–9) are *coordinate* transformation equations. Imagine that we are rotating the x, y axes 19.3° counterclockwise and y will now point up and to the left. So a negative shear stress on the rotated x face will point down and to the right as shown in Fig. 3–11d. Thus again, results agree with the semigraphical method.

For $\phi_s = 109.3^\circ$, Eqs. (3–8) and (3–9) give $\sigma = 40.0$ MPa and $\tau = +64.0$ MPa. Using the same logic for the coordinate transformation we find that results again agree with Fig. 3–11d.

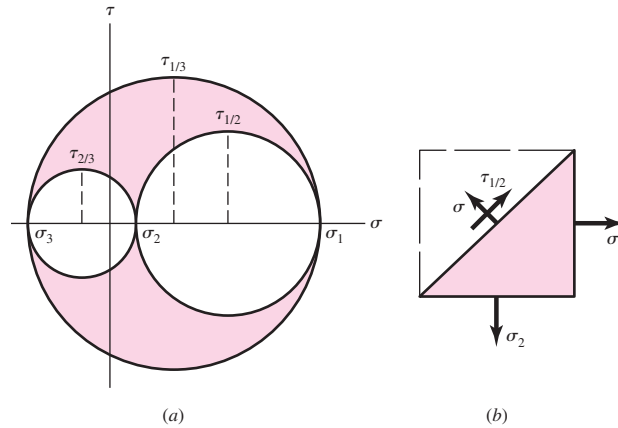
3–7 General Three-Dimensional Stress

As in the case of plane stress, a particular orientation of a stress element occurs in space for which all shear-stress components are zero. When an element has this particular orientation, the normals to the faces are mutually orthogonal and correspond to the principal directions, and the normal stresses associated with these faces are the principal stresses. Since there are three faces, there are three principal directions and three principal stresses σ_1, σ_2 , and σ_3 . For plane stress, the stress-free surface contains the third principal stress which is zero.

In our studies of plane stress we were able to specify any stress state σ_x, σ_y , and τ_{xy} and find the principal stresses and principal directions. But six components of stress are required to specify a general state of stress in three dimensions, and the problem of determining the principal stresses and directions is more difficult. In design, three-dimensional transformations are rarely performed since most maximum stress states occur under plane stress conditions. One notable exception is contact stress, which is not a case of plane stress, where the three principal stresses are given in Sec. 3–19. In fact, *all* states of stress are truly three-dimensional, where they might be described one- or two-dimensionally with respect to *specific* coordinate axes. Here it is most important to understand the relationship amongst the *three* principal stresses. The process in finding the three principal stresses from the six

Figure 3-12

Mohr's circles for three-dimensional stress.



stress components σ_x , σ_y , σ_z , τ_{xy} , τ_{yz} , and τ_{zx} , involves finding the roots of the cubic equation¹

$$\begin{aligned} \sigma^3 - (\sigma_x + \sigma_y + \sigma_z)\sigma^2 + (\sigma_x\sigma_y + \sigma_x\sigma_z + \sigma_y\sigma_z - \tau_{xy}^2 - \tau_{yz}^2 - \tau_{zx}^2)\sigma \\ - (\sigma_x\sigma_y\sigma_z + 2\tau_{xy}\tau_{yz}\tau_{zx} - \sigma_x\tau_{yz}^2 - \sigma_y\tau_{zx}^2 - \sigma_z\tau_{xy}^2) = 0 \end{aligned} \quad (3-15)$$

In plotting Mohr's circles for three-dimensional stress, the principal normal stresses are ordered so that $\sigma_1 \geq \sigma_2 \geq \sigma_3$. Then the result appears as in Fig. 3-12a. The stress coordinates σ , τ for any arbitrarily located plane will always lie on the boundaries or within the shaded area.

Figure 3-12a also shows the three *principal shear stresses* $\tau_{1/2}$, $\tau_{2/3}$, and $\tau_{1/3}$.² Each of these occurs on the two planes, one of which is shown in Fig. 3-12b. The figure shows that the principal shear stresses are given by the equations

$$\tau_{1/2} = \frac{\sigma_1 - \sigma_2}{2} \quad \tau_{2/3} = \frac{\sigma_2 - \sigma_3}{2} \quad \tau_{1/3} = \frac{\sigma_1 - \sigma_3}{2} \quad (3-16)$$

Of course, $\tau_{\max} = \tau_{1/3}$ when the normal principal stresses are ordered ($\sigma_1 > \sigma_2 > \sigma_3$), so always order your principal stresses. Do this in any computer code you generate and you'll always generate τ_{\max} .

3-8 Elastic Strain

Normal strain ϵ is defined and discussed in Sec. 2-1 for the tensile specimen and is given by Eq. (2-2) as $\epsilon = \delta/l$, where δ is the total elongation of the bar within the length l . Hooke's law for the tensile specimen is given by Eq. (2-3) as

$$\sigma = E\epsilon \quad (3-17)$$

where the constant E is called *Young's modulus* or the *modulus of elasticity*.

¹For development of this equation and further elaboration of three-dimensional stress transformations see: Richard G. Budynas, *Advanced Strength and Applied Stress Analysis*, 2nd ed., McGraw-Hill, New York, 1999, pp. 46–78.

²Note the difference between this notation and that for a shear stress, say, τ_{xy} . The use of the shilling mark is not accepted practice, but it is used here to emphasize the distinction.

When a material is placed in tension, there exists not only an axial strain, but also negative strain (contraction) perpendicular to the axial strain. Assuming a linear, homogeneous, isotropic material, this lateral strain is proportional to the axial strain. If the axial direction is x , then the lateral strains are $\epsilon_y = \epsilon_z = -\nu\epsilon_x$. The constant of proportionality ν is called *Poisson's ratio*, which is about 0.3 for most structural metals. See Table A–5 for values of ν for common materials.

If the axial stress is in the x direction, then from Eq. (3–17)

$$\epsilon_x = \frac{\sigma_x}{E} \quad \epsilon_y = \epsilon_z = -\nu\frac{\sigma_x}{E} \quad (3-18)$$

For a stress element undergoing σ_x , σ_y , and σ_z simultaneously, the normal strains are given by

$$\begin{aligned} \epsilon_x &= \frac{1}{E} [\sigma_x - \nu(\sigma_y + \sigma_z)] \\ \epsilon_y &= \frac{1}{E} [\sigma_y - \nu(\sigma_x + \sigma_z)] \\ \epsilon_z &= \frac{1}{E} [\sigma_z - \nu(\sigma_x + \sigma_y)] \end{aligned} \quad (3-19)$$

Shear strain γ is the change in a right angle of a stress element when subjected to pure shear stress, and Hooke's law for shear is given by

$$\tau = G\gamma \quad (3-20)$$

where the constant G is the *shear modulus of elasticity* or *modulus of rigidity*.

It can be shown for a linear, isotropic, homogeneous material, the three elastic constants are related to each other by

$$E = 2G(1 + \nu) \quad (3-21)$$

3–9 Uniformly Distributed Stresses

The assumption of a uniform distribution of stress is frequently made in design. The result is then often called *pure tension*, *pure compression*, or *pure shear*, depending upon how the external load is applied to the body under study. The word *simple* is sometimes used instead of *pure* to indicate that there are no other complicating effects. The tension rod is typical. Here a tension load F is applied through pins at the ends of the bar. The assumption of uniform stress means that if we cut the bar at a section remote from the ends and remove one piece, we can replace its effect by applying a uniformly distributed force of magnitude σA to the cut end. So the stress σ is said to be uniformly distributed. It is calculated from the equation

$$\sigma = \frac{F}{A} \quad (3-22)$$

This assumption of uniform stress distribution requires that:

- The bar be straight and of a homogeneous material
- The line of action of the force contains the centroid of the section
- The section be taken remote from the ends and from any discontinuity or abrupt change in cross section

For simple compression, Eq. (3–22) is applicable with F normally being considered a negative quantity. Also, a slender bar in compression may fail by buckling, and this possibility must be eliminated from consideration before Eq. (3–22) is used.³

Use of the equation

$$\tau = \frac{F}{A} \quad (3-23)$$

for a body, say, a bolt, in shear assumes a uniform stress distribution too. It is very difficult in practice to obtain a uniform distribution of shear stress. The equation is included because occasions do arise in which this assumption is utilized.

3–10 Normal Stresses for Beams in Bending

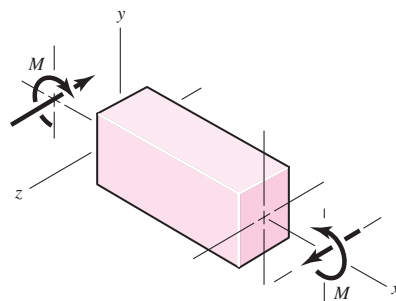
The equations for the normal bending stresses in straight beams are based on the following assumptions:

- 1 The beam is subjected to pure bending. This means that the shear force is zero, and that no torsion or axial loads are present.
- 2 The material is isotropic and homogeneous.
- 3 The material obeys Hooke's law.
- 4 The beam is initially straight with a cross section that is constant throughout the beam length.
- 5 The beam has an axis of symmetry in the plane of bending.
- 6 The proportions of the beam are such that it would fail by bending rather than by crushing, wrinkling, or sidewise buckling.
- 7 Plane cross sections of the beam remain plane during bending.

In Fig. 3–13 we visualize a portion of a straight beam acted upon by a positive bending moment M shown by the curved arrow showing the physical action of the moment together with a straight arrow indicating the moment vector. The x axis is coincident with the *neutral axis* of the section, and the xz plane, which contains the neutral axes of all cross sections, is called the *neutral plane*. Elements of the beam coincident with this plane have zero stress. The location of the neutral axis with respect to the cross section is coincident with the *centroidal axis* of the cross section.

Figure 3–13

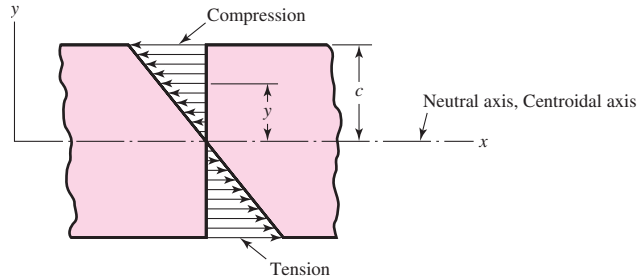
Straight beam in positive bending.



³See Sec. 4–11.

Figure 3-14

Bending stresses according to Eq. (3-24).



The bending stress varies linearly with the distance from the neutral axis, y , and is given by

$$\sigma_x = -\frac{My}{I} \quad (3-24)$$

where I is the second *moment of area* about the z axis. That is

$$I = \int y^2 dA \quad (3-25)$$

The stress distribution given by Eq. (3-24) is shown in Fig. 3-14. The maximum magnitude of the bending stress will occur where y has the greatest magnitude. Designating σ_{\max} as the maximum *magnitude* of the bending stress, and c as the maximum *magnitude* of y

$$\sigma_{\max} = \frac{Mc}{I} \quad (3-26a)$$

Equation (3-24) can still be used to ascertain as to whether σ_{\max} is tensile or compressive.

Equation (3-26a) is often written as

$$\sigma_{\max} = \frac{M}{Z} \quad (3-26b)$$

where $Z = I/c$ is called the *section modulus*.

EXAMPLE 3-5

A beam having a T section with the dimensions shown in Fig. 3-15 is subjected to a bending moment of $1600 \text{ N} \cdot \text{m}$ that causes tension at the top surface. Locate the neutral axis and find the maximum tensile and compressive bending stresses.

Solution

The area of the composite section is $A = 1956 \text{ mm}^2$. Now divide the T section into two rectangles, numbered 1 and 2, and sum the moments of these areas about the top edge. We then have

$$1956c_1 = 12(75)(6) + 12(88)(56)$$

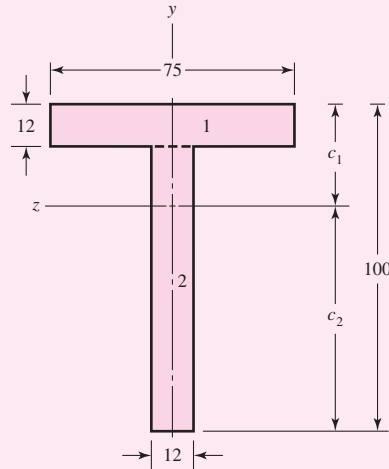
and hence $c_1 = 32.99 \text{ mm}$. Therefore $c_2 = 100 - 32.99 = 67.01 \text{ mm}$.

Next we calculate the second moment of area of each rectangle about its own centroidal axis. Using Table A-18, we find for the top rectangle

$$I_1 = \frac{1}{12}bh^3 = \frac{1}{12}(75)12^3 = 1.080 \times 10^4 \text{ mm}^4$$

Figure 3-15

Dimensions in millimeters.



For the bottom rectangle, we have

$$I_2 = \frac{1}{12}(12)88^3 = 6.815 \times 10^5 \text{ mm}^4$$

We now employ the *parallel-axis theorem* to obtain the second moment of area of the composite figure about its own centroidal axis. This theorem states

$$I_z = I_{cg} + Ad^2$$

where I_{cg} is the second moment of area about its own centroidal axis and I_z is the second moment of area about any parallel axis a distance d removed. For the top rectangle, the distance is

$$d_1 = 32.99 - 6 = 26.99 \text{ mm}$$

and for the bottom rectangle,

$$d_2 = 67.01 - 44 = 23.01 \text{ mm}$$

Using the parallel-axis theorem for both rectangles, we now find that

$$\begin{aligned} I &= [1.080 \times 10^4 + 12(75)26.99^2] + [6.815 \times 10^5 + 12(88)23.01^2] \\ &= 1.907 \times 10^6 \text{ mm}^4 \end{aligned}$$

Finally, the maximum tensile stress, which occurs at the top surface, is found to be

$$\text{Answer } \sigma = \frac{Mc_1}{I} = \frac{1600(32.99)10^{-3}}{1.907(10^{-6})} = 27.68(10^6) \text{ Pa} = 27.68 \text{ MPa}$$

Similarly, the maximum compressive stress at the lower surface is found to be

$$\text{Answer } \sigma = -\frac{Mc_2}{I} = -\frac{1600(67.01)10^{-3}}{1.907(10^{-6})} = -56.22(10^6) \text{ Pa} = -56.22 \text{ MPa}$$

Two-Plane Bending

Quite often, in mechanical design, bending occurs in both xy and xz planes. Considering cross sections with one or two planes of symmetry only, the bending stresses are given by

$$\sigma_x = -\frac{M_z y}{I_z} + \frac{M_y z}{I_y} \quad (3-27)$$

where the first term on the right side of the equation is identical to Eq. (3-24), M_y is the bending moment in the xz plane (moment vector in y direction), z is the distance from the neutral y axis, and I_y is the second area moment about the y axis.

For *noncircular* cross sections, Eq. (3-27) is the superposition of stresses caused by the two bending moment components. The maximum tensile and compressive bending stresses occur where the summation gives the greatest positive and negative stresses, respectively. For solid *circular* cross sections, all lateral axes are the same and the plane containing the moment corresponding to the vector sum of M_z and M_y contains the maximum bending stresses. For a beam of diameter d the maximum distance from the neutral axis is $d/2$, and from Table A-18, $I = \pi d^4/64$. The maximum bending stress for a solid circular cross section is then

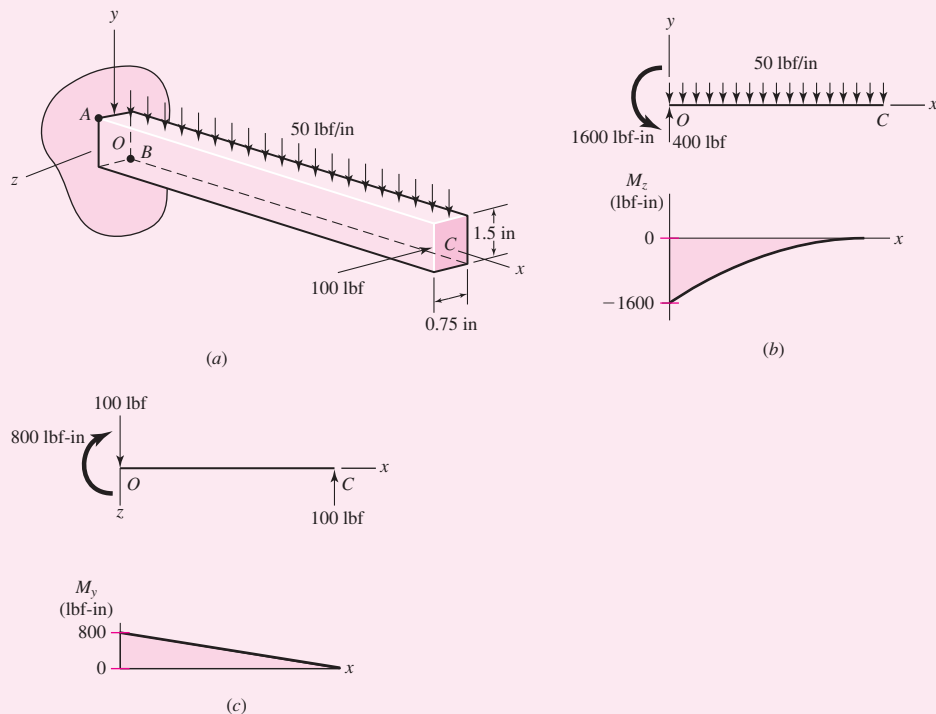
$$\sigma_m = \frac{Mc}{I} = \frac{(M_y^2 + M_z^2)^{1/2}(d/2)}{\pi d^4/64} = \frac{32}{\pi d^3}(M_y^2 + M_z^2)^{1/2} \quad (3-28)$$

EXAMPLE 3-6

As shown in Fig. 3-16a, beam OC is loaded in the xy plane by a uniform load of 50 lbf/in, and in the xz plane by a concentrated force of 100 lbf at end C . The beam is 8 in long.

Figure 3-16

(a) Beam loaded in two planes; (b) loading and bending-moment diagrams in xy plane; (c) loading and bending-moment diagrams in xz plane.



(a) For the cross section shown determine the maximum tensile and compressive bending stresses and where they act.

(b) If the cross section was a solid circular rod of diameter, $d = 1.25$ in, determine the magnitude of the maximum bending stress.

Solution

(a) The reactions at O and the bending-moment diagrams in the xy and xz planes are shown in Figs. 3–16*b* and *c*, respectively. The maximum moments in both planes occur at O where

$$(M_z)_O = -\frac{1}{2}(50)8^2 = -1600 \text{ lbf-in} \quad (M_y)_O = 100(8) = 800 \text{ lbf-in}$$

The second moments of area in both planes are

$$I_z = \frac{1}{12}(0.75)1.5^3 = 0.2109 \text{ in}^4 \quad I_y = \frac{1}{12}(1.5)0.75^3 = 0.05273 \text{ in}^4$$

The maximum tensile stress occurs at point A , shown in Fig. 3–16*a*, where the maximum tensile stress is due to both moments. At A , $y_A = 0.75$ in and $z_A = 0.375$ in. Thus, from Eq. (3–27)

$$\text{Answer} \quad (\sigma_x)_A = -\frac{-1600(0.75)}{0.2109} + \frac{800(0.375)}{0.05273} = 11\,380 \text{ psi} = 11.38 \text{ kpsi}$$

The maximum compressive bending stress occurs at point B where, $y_B = -0.75$ in and $z_B = -0.375$ in. Thus

$$\text{Answer} \quad (\sigma_x)_B = -\frac{-1600(-0.75)}{0.2109} + \frac{800(-0.375)}{0.05273} = -11\,380 \text{ psi} = -11.38 \text{ kpsi}$$

(b) For a solid circular cross section of diameter, $d = 1.25$ in, the maximum bending stress at end O is given by Eq. (3–28) as

$$\text{Answer} \quad \sigma_m = \frac{32}{\pi(1.25)^3} [800^2 + (-1600)^2]^{1/2} = 9326 \text{ psi} = 9.329 \text{ kpsi}$$

Beams with Asymmetrical Sections

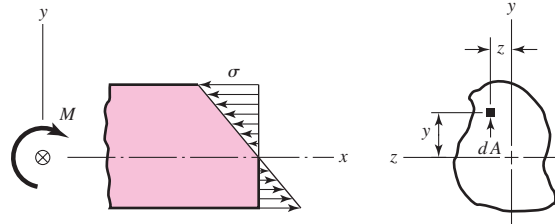
The relations developed earlier in this section can also be applied to beams having asymmetrical sections, provided that the plane of bending coincides with one of the two principal axes of the section. We have found that the stress at a distance y from the neutral axis is

$$\sigma = -\frac{My}{I} \quad (a)$$

Therefore, the force on the element of area dA in Fig. 3–17 is

$$dF = \sigma dA = -\frac{My}{I} dA$$

| Figure 3-17



Taking moments of this force about the y axis and integrating across the section gives

$$M_y = \int z dF = \int \sigma z dA = -\frac{M}{I} \int yz dA \quad (b)$$

We recognize that the last integral in Eq. (b) is the product of inertia I_{yz} . If the bending moment on the beam is in the plane of one of the principal axes, say the xy plane, then

$$I_{yz} = \int yz dA = 0 \quad (c)$$

With this restriction, the relations developed in Sec. 3-10 hold for any cross-sectional shape. Of course, this means that the designer has a special responsibility to ensure that the bending loads do, in fact, come onto the beam in a principal plane!

3-11 Shear Stresses for Beams in Bending

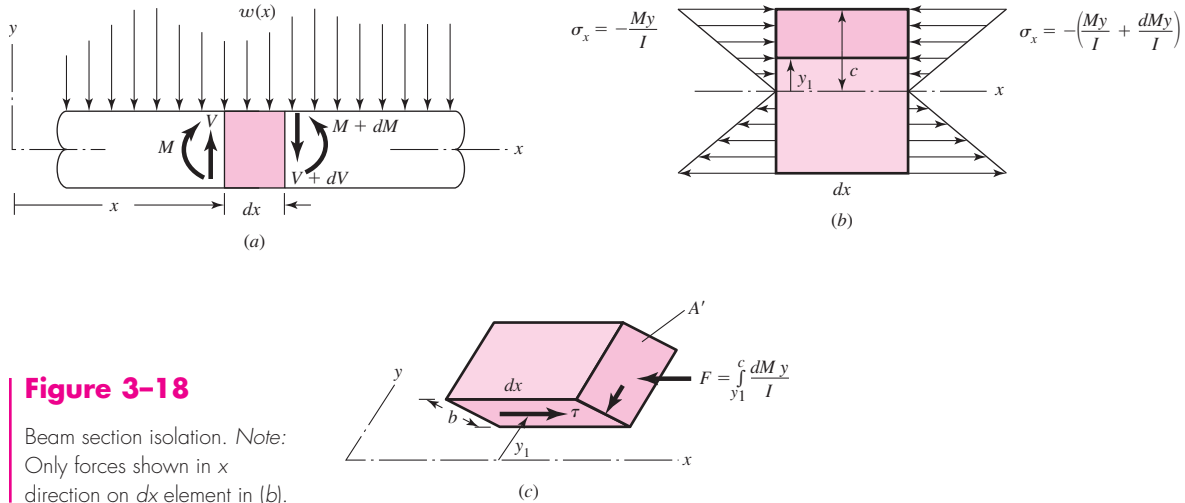
Most beams have both shear forces and bending moments present. It is only occasionally that we encounter beams subjected to pure bending, that is to say, beams having zero shear force. The flexure formula is developed on the assumption of pure bending. This is done, however, to eliminate the complicating effects of shear force in the development. For engineering purposes, the flexure formula is valid no matter whether a shear force is present or not. For this reason, we shall utilize the same normal bending-stress distribution [Eqs. (3-24) and (3-26)] when shear forces are also present.

In Fig. 3-18a we show a beam segment of constant cross section subjected to a shear force V and a bending moment M at x . Because of external loading and V , the shear force and bending moment change with respect to x . At $x + dx$ the shear force and bending moment are $V + dV$ and $M + dM$, respectively. Considering forces in the x direction only, Fig. 3-18b shows the stress distribution σ_x due to the bending moments. If dM is positive, with the bending moment increasing, the stresses on the right face, for a given value of y , are larger in magnitude than the stresses on the left face. If we further isolate the element by making a slice at $y = y_1$ (see Fig. 3-18b), the net force in the x direction will be directed to the left with a value of

$$\int_{y_1}^c \frac{(dM)y}{I} dA$$

as shown in the rotated view of Fig. 3-18c. For equilibrium, a shear force on the bottom face, directed to the right, is required. This shear force gives rise to a shear stress τ , where, if assumed uniform, the force is $\tau b dx$. Thus

$$\tau b dx = \int_{y_1}^c \frac{(dM)y}{I} dA \quad (a)$$

**Figure 3-18**

Beam section isolation. Note: Only forces shown in x direction on dx element in (b).

The term dM/I can be removed from within the integral and $b dx$ placed on the right side of the equation; then, from Eq. (3–3) with $V = dM/dx$, Eq. (a) becomes

$$\tau = \frac{V}{Ib} \int_{y_1}^c y dA \quad (3-29)$$

In this equation, the integral is the first moment of the area A' with respect to the neutral axis (see Fig. 3–18c). This integral is usually designated as Q . Thus

$$Q = \int_{y_1}^c y dA = \bar{y}' A' \quad (3-30)$$

where, for the isolated area y_1 to c , \bar{y}' is the distance in the y direction from the neutral plane to the centroid of the area A' . With this, Eq. (3–29) can be written as

$$\tau = \frac{VQ}{Ib} \quad (3-31)$$

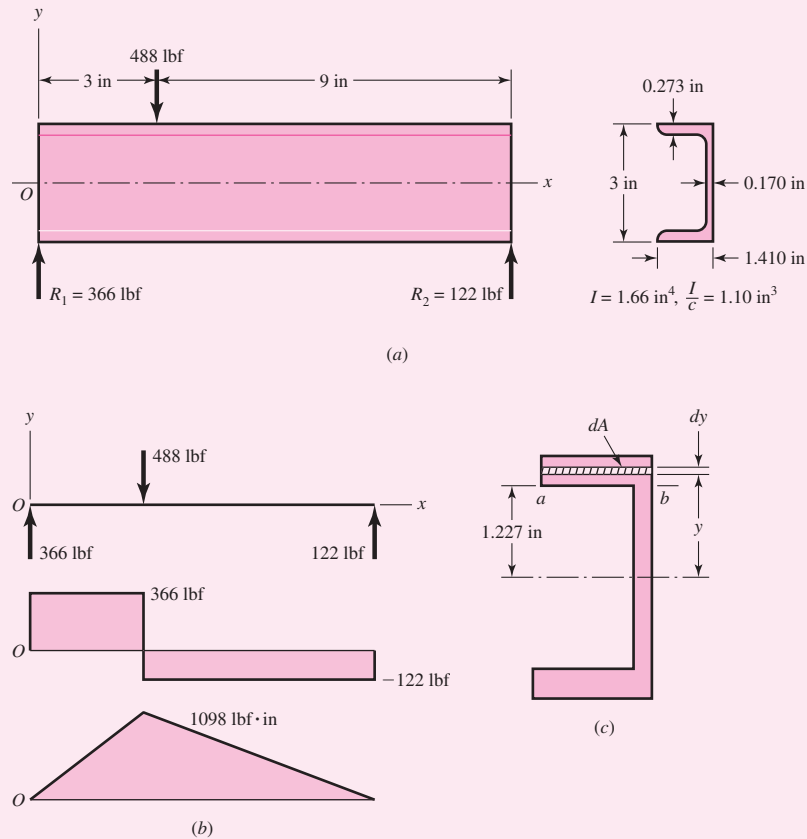
In using this equation, note that b is the width of the section at $y = y_1$. Also, I is the second moment of area of the entire section about the neutral axis.

Because cross shears are equal, and area A' is *finite*, the shear stress τ given by Eq. (3–31) and shown on area A' in Fig. 3–18c occurs only at $y = y_1$. The shear stress on the lateral area varies with y (normally maximum at the neutral axis where $y = 0$, and zero at the outer fibers of the beam where $Q = A' = 0$).

EXAMPLE 3-7

A beam 12 in long is to support a load of 488 lbf acting 3 in from the left support, as shown in Fig. 3–19a. Basing the design only on bending stress, a designer has selected a 3-in aluminum channel with the cross-sectional dimensions shown. If the direct shear is neglected, the stress in the beam may be actually higher than the designer thinks. Determine the principal stresses considering bending and direct shear and compare them with that considering bending only.

Figure 3-19



Solution The loading, shear-force, and bending-moment diagrams are shown in Fig. 3-19b. If the direct shear force is included in the analysis, the maximum stresses at the top and bottom of the beam will be the same as if only bending were considered. The maximum bending stresses are

$$\sigma = \pm \frac{Mc}{I} = \pm \frac{1098(1.5)}{1.66} = \pm 992 \text{ psi}$$

However, the maximum stress due to the combined bending and direct shear stresses may be maximum at the point $(3^-, 1.227)$ that is just to the left of the applied load, where the web joins the flange. To simplify the calculations we assume a cross section with square corners (Fig. 3-19c). The normal stress at section ab , with $x = 3$ in, is

$$\sigma = -\frac{My}{I} = -\frac{1098(1.227)}{1.66} = -812 \text{ psi}$$

For the shear stress at section ab , considering the area above ab and using Eq. (3-30) gives

$$Q = \bar{y}'A' = \left(1.227 + \frac{0.273}{2}\right)(1.410)(0.273) = 0.525 \text{ in}^3$$

Using Eq. (3–31) with $V = 366$ lbf, $I = 1.66$ in⁴, $Q = 0.525$ in³, and $b = 0.170$ in yields

$$\tau_{xy} = -\frac{VQ}{Ib} = -\frac{366(0.525)}{1.66(0.170)} = -681 \text{ psi}$$

The negative sign comes from recognizing that the shear stress is down on an x face of a $dx dy$ element at the location being considered.

The principal stresses at the point can now be determined. Using Eq. (3–13), we find that at $x = 3^-$ in, $y = 1.227$ in,

$$\begin{aligned}\sigma_1, \sigma_2 &= \frac{\sigma_x + \sigma_y}{2} \pm \sqrt{\left(\frac{\sigma_x - \sigma_y}{2}\right)^2 + \tau_{xy}^2} \\ &= \frac{-812 + 0}{2} \pm \sqrt{\left(\frac{-812 - 0}{2}\right)^2 + (-681)^2} = 387, -1200 \text{ psi}\end{aligned}$$

For a point at $x = 3^-$ in, $y = -1.227$ in, the principal stresses are $\sigma_1, \sigma_2 = 1200, -387$ psi. Thus we see that the maximum principal stresses are ± 1200 psi, 21 percent higher than thought by the designer.

Shear Stresses in Standard-Section Beams

The shear stress distribution in a beam depends on how Q/b varies as a function of y_1 . Here we will show how to determine the shear stress distribution for a beam with a rectangular cross section and provide results of maximum values of shear stress for other standard cross sections. Figure 3–20 shows a portion of a beam with a rectangular cross section, subjected to a shear force V and a bending moment M . As a result of the bending moment, a normal stress σ is developed on a cross section such as $A-A$, which is in compression above the neutral axis and in tension below. To investigate the shear stress at a distance y_1 above the neutral axis, we select an element of area dA at a distance y above the neutral axis. Then, $dA = b dy$, and so Eq. (3–30) becomes

$$Q = \int_{y_1}^c y dA = b \int_{y_1}^c y dy = \frac{by^2}{2} \Big|_{y_1}^c = \frac{b}{2} (c^2 - y_1^2) \quad (a)$$

Substituting this value for Q into Eq. (3–31) gives

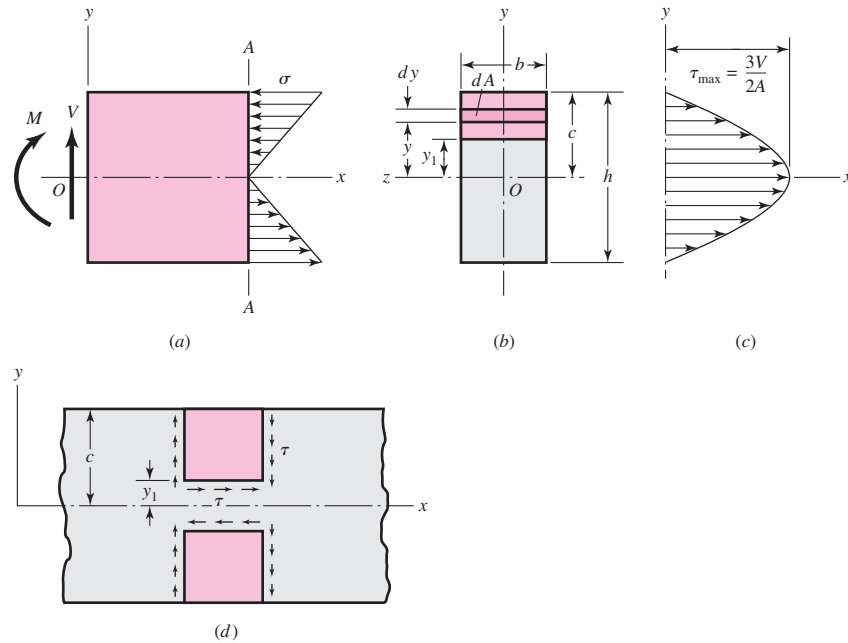
$$\tau = \frac{V}{2I} (c^2 - y_1^2) \quad (3-32)$$

This is the general equation for shear stress in a rectangular beam. To learn something about it, let us make some substitutions. From Table A–18, the second moment of area for a rectangular section is $I = bh^3/12$; substituting $h = 2c$ and $A = bh = 2bc$ gives

$$I = \frac{Ac^2}{3} \quad (b)$$

Figure 3-20

Shear stresses in a rectangular beam.



If we now use this value of I for Eq. (3-32) and rearrange, we get

$$\tau = \frac{3V}{2A} \left(1 - \frac{y_1^2}{c^2} \right) \quad (3-33)$$

We note that the maximum shear stress exists when $y_1 = 0$, which is at the bending neutral axis. Thus




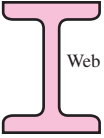
$$\tau_{\max} = \frac{3V}{2A} \quad (3-34)$$

for a rectangular section. As we move away from the neutral axis, the shear stress decreases parabolically until it is zero at the outer surfaces where $y_1 = \pm c$, as shown in Fig. 3-20c. It is particularly interesting and significant here to observe that the shear stress is maximum at the bending neutral axis, where the normal stress due to bending is zero, and that the shear stress is zero at the outer surfaces, where the bending stress is a maximum. Horizontal shear stress is always accompanied by vertical shear stress of the same magnitude, and so the distribution can be diagrammed as shown in Fig. 3-20d. Figure 3-20c shows that the shear τ on the vertical surfaces varies with y . We are almost always interested in the horizontal shear, τ in Fig. 3-20d, which is nearly uniform with constant y . The maximum horizontal shear occurs where the vertical shear is largest. This is usually at the neutral axis but may not be if the width b is smaller somewhere else. Furthermore, if the section is such that b can be minimized on a plane not horizontal, then the horizontal shear stress occurs on an inclined plane. For example, with tubing, the horizontal shear stress occurs on a radial plane and the corresponding “vertical shear” is not vertical, but tangential.

Formulas for the maximum flexural shear stress for the most commonly used shapes are listed in Table 3-2.

Table 3-2

Formulas for Maximum
Shear Stress Due to
Bending

Beam Shape	Formula	Beam Shape	Formula
 Rectangular	$\tau_{\max} = \frac{3V}{2A}$	 Hollow, thin-walled round	$\tau_{\max} = \frac{2V}{A}$
 Circular	$\tau_{\max} = \frac{4V}{3A}$	 Structural I beam (thin-walled)	$\tau_{\max} = \frac{V}{A_{\text{web}}}$

3-12 Torsion

Any moment vector that is collinear with an axis of a mechanical element is called a *torque vector*, because the moment causes the element to be twisted about that axis. A bar subjected to such a moment is also said to be in *torsion*.

As shown in Fig. 3-21, the torque T applied to a bar can be designated by drawing arrows on the surface of the bar to indicate direction or by drawing torque-vector arrows along the axes of twist of the bar. Torque vectors are the hollow arrows shown on the x axis in Fig. 3-21. Note that they conform to the right-hand rule for vectors.

The *angle of twist*, in radians, for a solid round bar is

$$\theta = \frac{Tl}{GJ} \quad (3-35)$$

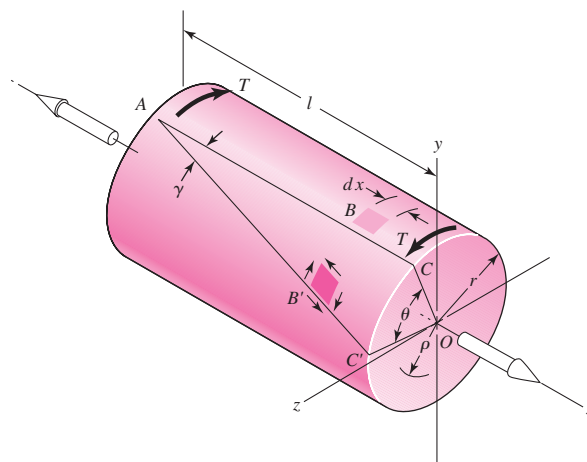
where T = torque

l = length

G = modulus of rigidity

J = polar second moment of area

Figure 3-21



Shear stresses develop throughout the cross section. For a round bar in torsion, these stresses are proportional to the radius ρ and are given by

$$\tau = \frac{T\rho}{J} \quad (3-36)$$

Designating r as the radius to the outer surface, we have

$$\tau_{\max} = \frac{Tr}{J} \quad (3-37)$$

The assumptions used in the analysis are:

- The bar is acted upon by a pure torque, and the sections under consideration are remote from the point of application of the load and from a change in diameter.
- Adjacent cross sections originally plane and parallel remain plane and parallel after twisting, and any radial line remains straight.
- The material obeys Hooke's law.

Equation (3-37) applies *only* to circular sections. For a solid round section,

$$J = \frac{\pi d^4}{32} \quad (3-38)$$

where d is the diameter of the bar. For a hollow round section,

$$J = \frac{\pi}{32}(d_o^4 - d_i^4) \quad (3-39)$$

where the subscripts o and i refer to the outside and inside diameters, respectively.

In using Eq. (3-37) it is often necessary to obtain the torque T from a consideration of the power and speed of a rotating shaft. For convenience when U. S. Customary units are used, three forms of this relation are

$$H = \frac{FV}{33\,000} = \frac{2\pi Tn}{33\,000(12)} = \frac{Tn}{63\,025} \quad (3-40)$$

where H = power, hp
 T = torque, lbf · in
 n = shaft speed, rev/min
 F = force, lbf
 V = velocity, ft/min

When SI units are used, the equation is

$$H = T\omega \quad (3-41)$$

where H = power, W
 T = torque, N · m
 ω = angular velocity, rad/s

The torque T corresponding to the power in watts is given approximately by

$$T = 9.55 \frac{H}{n} \quad (3-42)$$

where n is in revolutions per minute.

There are some applications in machinery for noncircular-cross-section members and shafts where a regular polygonal cross section is useful in transmitting torque to a gear or pulley that can have an axial change in position. Because no key or keyway is needed, the possibility of a lost key is avoided. Saint Venant (1855) showed that the maximum shearing stress in a rectangular $b \times c$ section bar occurs in the middle of the *longest* side b and is of the magnitude

$$\tau_{\max} = \frac{T}{\alpha bc^2} \doteq \frac{T}{bc^2} \left(3 + \frac{1.8}{b/c} \right) \quad (3-43)$$

where b is the longer side, c the shorter side, and α a factor that is a function of the ratio b/c as shown in the following table.⁴ The angle of twist is given by

$$\theta = \frac{Tl}{\beta bc^3 G} \quad (3-44)$$

where β is a function of b/c , as shown in the table.

b/c	1.00	1.50	1.75	2.00	2.50	3.00	4.00	6.00	8.00	10	∞
α	0.208	0.231	0.239	0.246	0.258	0.267	0.282	0.299	0.307	0.313	0.333
β	0.141	0.196	0.214	0.228	0.249	0.263	0.281	0.299	0.307	0.313	0.333

In Eqs. (3–43) and (3–44) b and c are the width (long side) and thickness (short side) of the bar, respectively. They cannot be interchanged. Equation (3–43) is also approximately valid for equal-sided angles; these can be considered as two rectangles, each of which is capable of carrying half the torque.⁵

⁴S. Timoshenko, *Strength of Materials*, Part I, 3rd ed., D. Van Nostrand Company, New York, 1955, p. 290.

⁵For other sections see W. C. Young and R. G. Budynas, *Roark's Formulas for Stress and Strain*, 7th ed., McGraw-Hill, New York, 2002.

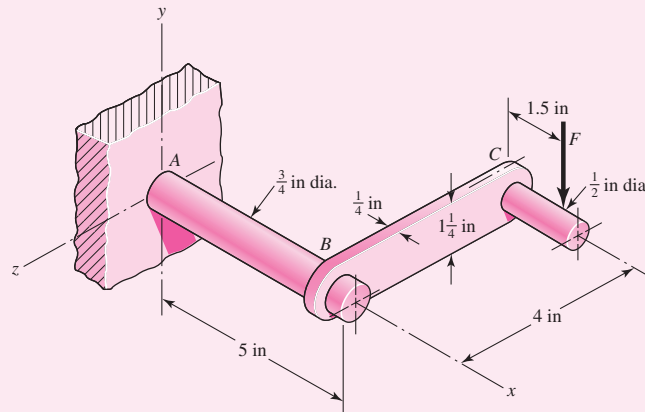
EXAMPLE 3-8

Figure 3–22 shows a crank loaded by a force $F = 300$ lbf that causes twisting and bending of a $\frac{3}{4}$ -in-diameter shaft fixed to a support at the origin of the reference system. In actuality, the support may be an inertia that we wish to rotate, but for the purposes of a stress analysis we can consider this a statics problem.

(a) Draw separate free-body diagrams of the shaft AB and the arm BC , and compute the values of all forces, moments, and torques that act. Label the directions of the coordinate axes on these diagrams.

(b) Compute the maxima of the torsional stress and the bending stress in the arm BC and indicate where these act.

Figure 3-22



(c) Locate a stress element on the top surface of the shaft at A, and calculate all the stress components that act upon this element.

(d) Determine the maximum normal and shear stresses at A.

Solution (a) The two free-body diagrams are shown in Fig. 3-23. The results are

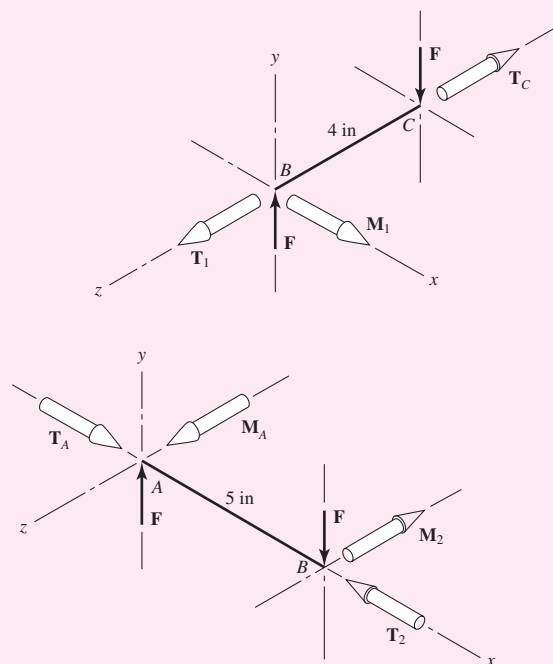
At end C of arm BC: $\mathbf{F} = -300\mathbf{j}$ lbf, $\mathbf{T}_C = -450\mathbf{k}$ lbf · in

At end B of arm BC: $\mathbf{F} = 300\mathbf{j}$ lbf, $\mathbf{M}_1 = 1200\mathbf{i}$ lbf · in, $\mathbf{T}_1 = 450\mathbf{k}$ lbf · in

At end B of shaft AB: $\mathbf{F} = -300\mathbf{j}$ lbf, $\mathbf{T}_2 = -1200\mathbf{i}$ lbf · in, $\mathbf{M}_2 = -450\mathbf{k}$ lbf · in

At end A of shaft AB: $\mathbf{F} = 300\mathbf{j}$ lbf, $\mathbf{M}_A = 1950\mathbf{k}$ lbf · in, $\mathbf{T}_A = 1200\mathbf{i}$ lbf · in

Figure 3-23



(b) For arm BC , the bending moment will reach a maximum near the shaft at B . If we assume this is $1200 \text{ lbf} \cdot \text{in}$, then the bending stress for a rectangular section will be

$$\text{Answer} \quad \sigma = \frac{M}{I/c} = \frac{6M}{bh^2} = \frac{6(1200)}{0.25(1.25)^2} = 18\,400 \text{ psi}$$

Of course, this is not exactly correct, because at B the moment is actually being transferred into the shaft, probably through a weldment.

For the torsional stress, use Eq. (3–43). Thus

$$\text{Answer} \quad \tau_{\max} = \frac{T}{bc^2} \left(3 + \frac{1.8}{b/c} \right) = \frac{450}{1.25(0.25^2)} \left(3 + \frac{1.8}{1.25/0.25} \right) = 19\,400 \text{ psi}$$

This stress occurs at the middle of the $1\frac{1}{4}$ -in side.

(c) For a stress element at A , the bending stress is tensile and is

$$\text{Answer} \quad \sigma_x = \frac{M}{I/c} = \frac{32M}{\pi d^3} = \frac{32(1950)}{\pi(0.75)^3} = 47\,100 \text{ psi}$$

The torsional stress is

$$\text{Answer} \quad \tau_{xz} = \frac{-T}{J/c} = \frac{-16T}{\pi d^3} = \frac{-16(1200)}{\pi(0.75)^3} = -14\,500 \text{ psi}$$

where the reader should verify that the negative sign accounts for the direction of τ_{xz} .

(d) Point A is in a state of plane stress where the stresses are in the xz plane. Thus the principal stresses are given by Eq. (3–13) with subscripts corresponding to the x, z axes.

Answer The maximum normal stress is then given by

$$\begin{aligned} \sigma_1 &= \frac{\sigma_x + \sigma_z}{2} + \sqrt{\left(\frac{\sigma_x - \sigma_z}{2}\right)^2 + \tau_{xz}^2} \\ &= \frac{47.1 + 0}{2} + \sqrt{\left(\frac{47.1 - 0}{2}\right)^2 + (-14.5)^2} = 51.2 \text{ kpsi} \end{aligned}$$

Answer The maximum shear stress at A occurs on surfaces different than the surfaces containing the principal stresses or the surfaces containing the bending and torsional shear stresses. The maximum shear stress is given by Eq. (3–14), again with modified subscripts, and is given by

$$\tau_1 = \sqrt{\left(\frac{\sigma_x - \sigma_z}{2}\right)^2 + \tau_{xz}^2} = \sqrt{\left(\frac{47.1 - 0}{2}\right)^2 + (-14.5)^2} = 27.7 \text{ kpsi}$$

EXAMPLE 3–9

The 1.5-in-diameter solid steel shaft shown in Fig. 3–24*a* is simply supported at the ends. Two pulleys are keyed to the shaft where pulley *B* is of diameter 4.0 in and pulley *C* is of diameter 8.0 in. Considering bending and torsional stresses only, determine the locations and magnitudes of the greatest tensile, compressive, and shear stresses in the shaft.

Solution

Figure 3–24*b* shows the net forces, reactions, and torsional moments on the shaft. Although this is a three-dimensional problem and vectors might seem appropriate, we will look at the components of the moment vector by performing a two-plane analysis. Figure 3–24*c* shows the loading in the *xy* plane, as viewed down the *z* axis, where bending moments are actually vectors in the *z* direction. Thus we label the moment diagram as M_z versus *x*. For the *xz* plane, we look down the *y* axis, and the moment diagram is M_y versus *x* as shown in Fig. 3–24*d*.

The net moment on a section is the vector sum of the components. That is,

$$M = \sqrt{M_y^2 + M_z^2} \quad (1)$$

At point *B*,

$$M_B = \sqrt{2000^2 + 8000^2} = 8246 \text{ lbf} \cdot \text{in}$$

At point *C*,

$$M_C = \sqrt{4000^2 + 4000^2} = 5657 \text{ lbf} \cdot \text{in}$$

Thus the maximum bending moment is 8246 lbf · in and the maximum bending stress at pulley *B* is

$$\sigma = \frac{M d/2}{\pi d^4/64} = \frac{32M}{\pi d^3} = \frac{32(8246)}{\pi(1.5^3)} = 24\,890 \text{ psi}$$

The maximum torsional shear stress occurs between *B* and *C* and is

$$\tau = \frac{T d/2}{\pi d^4/32} = \frac{16T}{\pi d^3} = \frac{16(1600)}{\pi(1.5^3)} = 2414 \text{ psi}$$

The maximum bending and torsional shear stresses occur just to the right of pulley *B* at points *E* and *F* as shown in Fig. 3–24*e*. At point *E*, the maximum tensile stress will be σ_1 given by

$$\text{Answer} \quad \sigma_1 = \frac{\sigma}{2} + \sqrt{\left(\frac{\sigma}{2}\right)^2 + \tau^2} = \frac{24\,890}{2} + \sqrt{\left(\frac{24\,890}{2}\right)^2 + 2414^2} = 25\,120 \text{ psi}$$

At point *F*, the maximum compressive stress will be σ_2 given by

$$\text{Answer} \quad \sigma_2 = \frac{-\sigma}{2} - \sqrt{\left(\frac{-\sigma}{2}\right)^2 + \tau^2} = \frac{-24\,890}{2} - \sqrt{\left(\frac{-24\,890}{2}\right)^2 + 2414^2} = -25\,120 \text{ psi}$$

The extreme shear stress also occurs at *E* and *F* and is

$$\text{Answer} \quad \tau_1 = \sqrt{\left(\frac{\pm\sigma}{2}\right)^2 + \tau^2} = \sqrt{\left(\frac{\pm 24\,890}{2}\right)^2 + 2414^2} = 12\,680 \text{ psi}$$

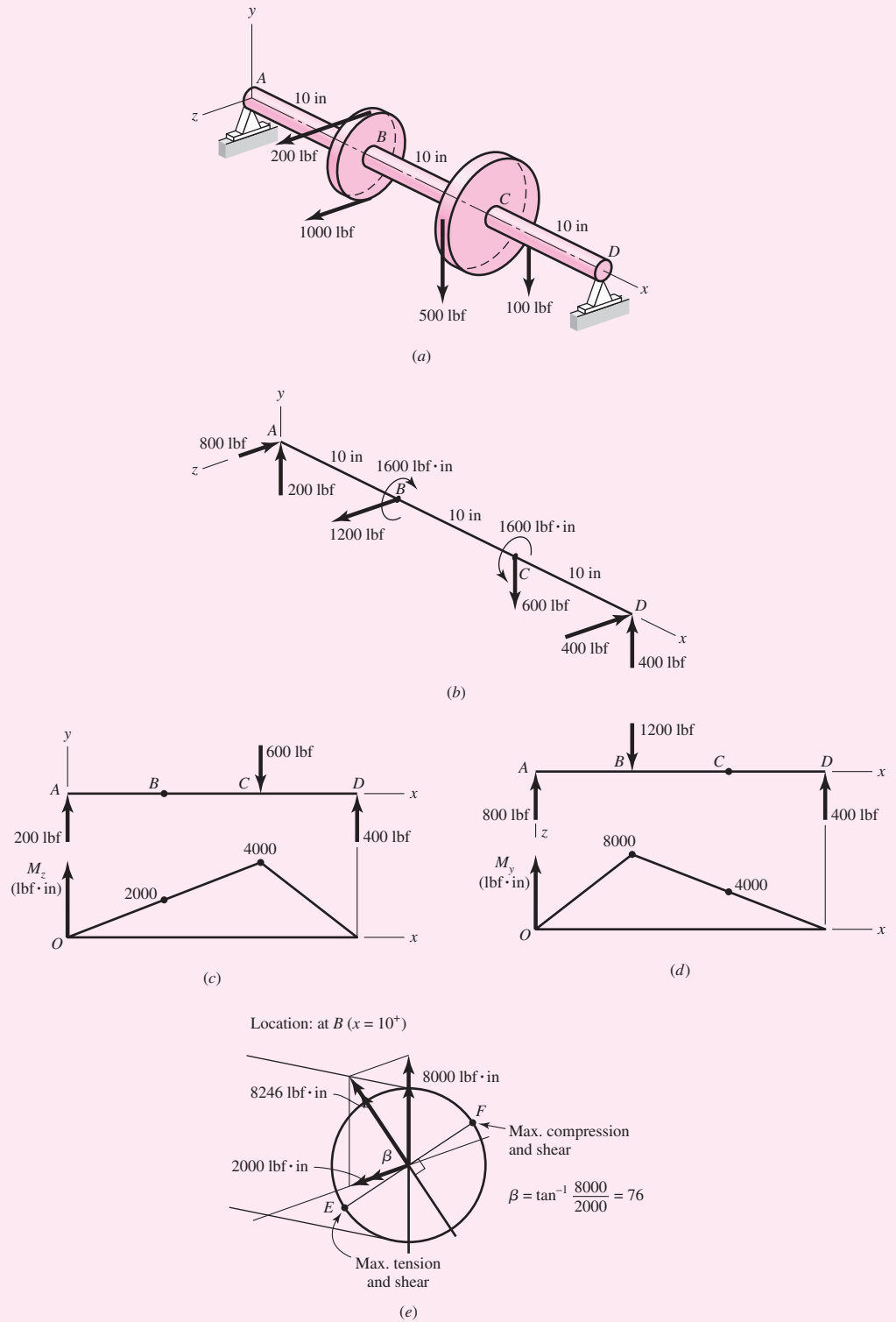
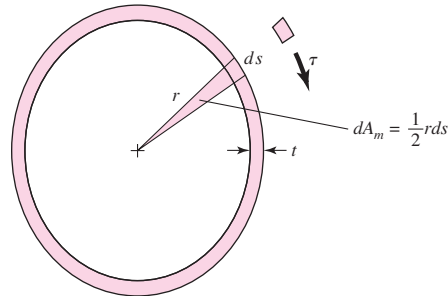


Figure 3-24

Figure 3–25

The depicted cross section is elliptical, but the section need not be symmetrical nor of constant thickness.



Closed Thin-Walled Tubes ($t \ll r$)⁶

In closed thin-walled tubes, it can be shown that the product of shear stress times thickness of the wall τt is constant, meaning that the shear stress τ is inversely proportional to the wall thickness t . The total torque T on a tube such as depicted in Fig. 3–25 is given by

$$T = \int \tau t r ds = (\tau t) \int r ds = \tau t (2A_m) = 2A_m t \tau$$

where A_m is the area enclosed by the section median line. Solving for τ gives

$$\tau = \frac{T}{2A_m t} \quad (3-45)$$

For constant wall thickness t , the angular twist (radians) per unit of length of the tube θ_1 is given by

$$\theta_1 = \frac{T L_m}{4G A_m^2 t} \quad (3-46)$$

where L_m is the perimeter of the section median line. These equations presume the buckling of the tube is prevented by ribs, stiffeners, bulkheads, and so on, and that the stresses are below the proportional limit.

⁶See Sec. 3–13, F. P. Beer, E. R. Johnston, and J. T. De Wolf, *Mechanics of Materials*, 4th ed., McGraw-Hill, New York, 2006.

EXAMPLE 3–10

A welded steel tube is 40 in long, has a $\frac{1}{8}$ -in wall thickness, and a 2.5-in by 3.6-in rectangular cross section as shown in Fig. 3–26. Assume an allowable shear stress of 11 500 psi and a shear modulus of $11.5(10^6)$ psi.

- Estimate the allowable torque T .
- Estimate the angle of twist due to the torque.

Solution

(a) Within the section median line, the area enclosed is

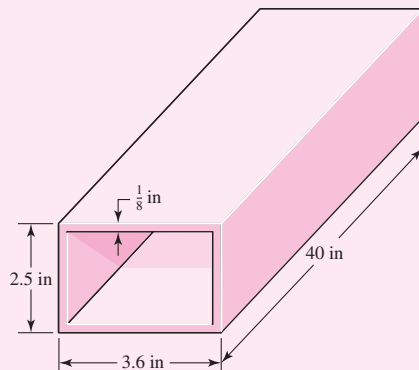
$$A_m = (2.5 - 0.125)(3.6 - 0.125) = 8.253 \text{ in}^2$$

and the length of the median perimeter is

$$L_m = 2[(2.5 - 0.125) + (3.6 - 0.125)] = 11.70 \text{ in}$$

Figure 3–26

A rectangular steel tube produced by welding.



Answer From Eq. (3–45) the torque T is

$$T = 2A_m t \tau = 2(8.253)0.125(11\,500) = 23\,730 \text{ lbf} \cdot \text{in}$$

Answer (b) The angle of twist θ from Eq. (3–46) is

$$\theta = \theta_1 l = \frac{TL_m}{4GA_m^2 t} l = \frac{23\,730(11.70)}{4(11.5 \times 10^6)(8.253^2)(0.125)}(40) = 0.0284 \text{ rad} = 1.62^\circ$$

EXAMPLE 3–11

Compare the shear stress on a circular cylindrical tube with an outside diameter of 1 in and an inside diameter of 0.9 in, predicted by Eq. (3–37), to that estimated by Eq. (3–45).

Solution From Eq. (3–37),

$$\tau_{\max} = \frac{Tr}{J} = \frac{Tr}{(\pi/32)(d_o^4 - d_i^4)} = \frac{T(0.5)}{(\pi/32)(1^4 - 0.9^4)} = 14.809T$$

From Eq. (3–45),

$$\tau = \frac{T}{2A_m t} = \frac{T}{2(\pi 0.95^2/4)0.05} = 14.108T$$

Taking Eq. (3–37) as correct, the error in the thin-wall estimate is -4.7 percent.

Open Thin-Walled Sections

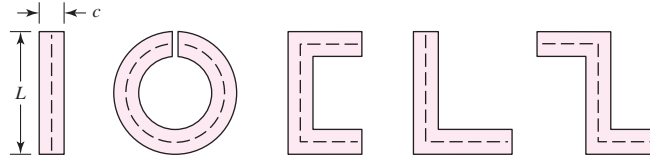
When the median wall line is not closed, it is said to be *open*. Figure 3–27 presents some examples. Open sections in torsion, where the wall is thin, have relations derived from the membrane analogy theory⁷ resulting in:

$$\tau = G\theta_1 c = \frac{3T}{Lc^2} \quad (3-47)$$

⁷See S. P. Timoshenko and J. N. Goodier, *Theory of Elasticity*, 3rd ed., McGraw-Hill, New York, 1970, Sec. 109.

Figure 3-27

Some open thin-wall sections.



where τ is the shear stress, G is the shear modulus, θ_1 is the angle of twist per unit length, T is torque, and L is the length of the median line. The wall thickness is designated c (rather than t) to remind you that you are in open sections. By studying the table that follows Eq. (3-44) you will discover that membrane theory presumes $b/c \rightarrow \infty$. Note that open thin-walled sections in torsion should be avoided in design. As indicated in Eq. (3-47), the shear stress and the angle of twist are inversely proportional to c^2 and c^3 , respectively. Thus, for small wall thickness, stress and twist can become quite large. For example, consider the thin round tube with a slit in Fig. 3-27. For a ratio of wall thickness of outside diameter of $c/d_o = 0.1$, the open section has greater magnitudes of stress and angle of twist by factors of 12.3 and 61.5, respectively, compared to a closed section of the same dimensions.

EXAMPLE 3-12

A 12-in-long strip of steel is $\frac{1}{8}$ in thick and 1 in wide, as shown in Fig. 3-28. If the allowable shear stress is 11 500 psi and the shear modulus is $11.5(10^6)$ psi, find the torque corresponding to the allowable shear stress and the angle of twist, in degrees, (a) using Eq. (3-47) and (b) using Eqs. (3-43) and (3-44).

Solution

(a) The length of the median line is 1 in. From Eq. (3-47),

$$T = \frac{Lc^2\tau}{3} = \frac{(1)(1/8)^2 11\,500}{3} = 59.90 \text{ lbf} \cdot \text{in}$$

$$\theta = \theta_1 l = \frac{\tau l}{Gc} = \frac{11\,500(12)}{11.5(10^6)(1/8)} = 0.0960 \text{ rad} = 5.5^\circ$$

A torsional spring rate k_t can be expressed as T/θ :

$$k_t = 59.90/0.0960 = 624 \text{ lbf} \cdot \text{in/rad}$$

(b) From Eq. (3-43),

$$T = \frac{\tau_{\max}bc^2}{3 + 1.8/(b/c)} = \frac{11\,500(1)(0.125)^2}{3 + 1.8/(1/0.125)} = 55.72 \text{ lbf} \cdot \text{in}$$

From Eq. (3-44), with $b/c = 1/0.125 = 8$,

$$\theta = \frac{Tl}{\beta bc^3 G} = \frac{55.72(12)}{0.307(1)0.125^3(11.5)10^6} = 0.0970 \text{ rad} = 5.6^\circ$$

$$k_t = 55.72/0.0970 = 574 \text{ lbf} \cdot \text{in/rad}$$

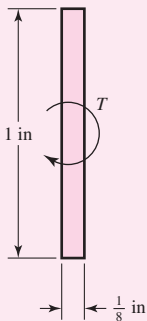


Figure 3-28

The cross-section of a thin strip of steel subjected to a torsional moment T .

3–13 Stress Concentration

In the development of the basic stress equations for tension, compression, bending, and torsion, it was assumed that no geometric irregularities occurred in the member under consideration. But it is quite difficult to design a machine without permitting some changes in the cross sections of the members. Rotating shafts must have shoulders designed on them so that the bearings can be properly seated and so that they will take thrust loads; and the shafts must have key slots machined into them for securing pulleys and gears. A bolt has a head on one end and screw threads on the other end, both of which account for abrupt changes in the cross section. Other parts require holes, oil grooves, and notches of various kinds. Any discontinuity in a machine part alters the stress distribution in the neighborhood of the discontinuity so that the elementary stress equations no longer describe the state of stress in the part at these locations. Such discontinuities are called *stress raisers*, and the regions in which they occur are called areas of *stress concentration*.

The distribution of elastic stress across a section of a member may be uniform as in a bar in tension, linear as a beam in bending, or even rapid and curvaceous as in a sharply curved beam. Stress concentrations can arise from some irregularity not inherent in the member, such as tool marks, holes, notches, grooves, or threads. The *nominal stress* is said to exist if the member is free of the stress raiser. This definition is not always honored, so check the definition on the stress-concentration chart or table you are using.

A *theoretical*, or *geometric*, *stress-concentration factor* K_t or K_{ts} is used to relate the actual maximum stress at the discontinuity to the nominal stress. The factors are defined by the equations

$$K_t = \frac{\sigma_{\max}}{\sigma_0} \quad K_{ts} = \frac{\tau_{\max}}{\tau_0} \quad (3-48)$$

where K_t is used for normal stresses and K_{ts} for shear stresses. The nominal stress σ_0 or τ_0 is more difficult to define. Generally, it is the stress calculated by using the elementary stress equations and the net area, or net cross section. But sometimes the gross cross section is used instead, and so it is always wise to double check your source of K_t or K_{ts} before calculating the maximum stress.

The subscript t in K_t means that this stress-concentration factor depends for its value only on the *geometry* of the part. That is, the particular material used has no effect on the value of K_t . This is why it is called a *theoretical* stress-concentration factor.

The analysis of geometric shapes to determine stress-concentration factors is a difficult problem, and not many solutions can be found. Most stress-concentration factors are found by using experimental techniques.⁸ Though the finite-element method has been used, the fact that the elements are indeed finite prevents finding the true maximum stress. Experimental approaches generally used include photoelasticity, grid methods, brittle-coating methods, and electrical strain-gauge methods. Of course, the grid and strain-gauge methods both suffer from the same drawback as the finite-element method.

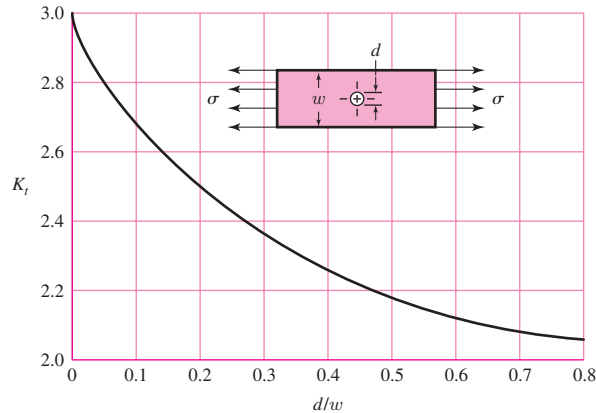
Stress-concentration factors for a variety of geometries may be found in Tables A–15 and A–16.

⁸The best source book is W. D. Pilkey, *Peterson's Stress Concentration Factors*, 2nd ed., John Wiley & Sons, New York, 1997.

Figure 3–29

Thin plate in tension or simple compression with a transverse central hole. The net tensile force is $F = \sigma wt$, where t is the thickness of the plate. The nominal stress is given by

$$\sigma_0 = \frac{F}{(w-d)t} = \frac{w}{w-d}\sigma$$



An example is shown in Fig. 3–29, that of a thin plate loaded in tension where the plate contains a centrally located hole.

In *static loading*, stress-concentration factors are applied as follows. In ductile ($\epsilon_f \geq 0.05$) materials, the stress-concentration factor *is not* usually applied to predict the critical stress, because plastic strain in the region of the stress is localized and has a strengthening effect. In *brittle materials* ($\epsilon_f < 0.05$), the geometric stress-concentration factor K_t is applied to the nominal stress before comparing it with strength. Gray cast iron has so many inherent stress raisers that the stress raisers introduced by the designer have only a modest (but additive) effect.

EXAMPLE 3–13 Be Alert to Viewpoint

On a “spade” rod end (or lug) a load is transferred through a pin to a rectangular-cross-section rod or strap. The theoretical or geometric stress-concentration factor for this geometry is known as follows, on the basis of the net area $A = (w - d)t$ as shown in Fig. 3–30.

d/w	0.15	0.20	0.25	0.30	0.35	0.40	0.45	0.50
K_t	7.4	5.4	4.6	3.7	3.2	2.8	2.6	2.45

As presented in the table, K_t is a decreasing monotone. This rod end is similar to the square-ended lug depicted in Fig. A–15-12 of appendix A.

$$\sigma_{\max} = K_t \sigma_0 \tag{a}$$

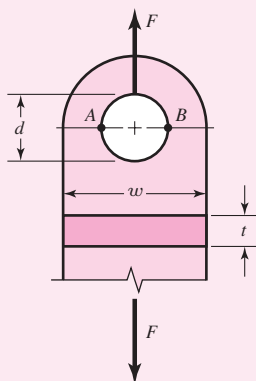
$$\sigma_{\max} = \frac{K_t F}{A} = K_t \frac{F}{(w-d)t} \tag{b}$$

It is insightful to base the stress concentration factor on the *unnotched* area, wt . Let

$$\sigma_{\max} = K'_t \frac{F}{wt} \tag{c}$$

By equating Eqs. (b) and (c) and solving for K'_t we obtain

$$K'_t = \frac{wt}{F} K_t \frac{F}{(w-d)t} = \frac{K_t}{1-d/w} \tag{d}$$

**Figure 3-30**

A round-ended lug end to a rectangular cross-section rod. The maximum tensile stress in the lug occurs at locations A and B. The net area $A = (w - d)t$ is used in the definition of K_t , but there is an advantage to using the total area wt .

A power regression curve-fit for the data in the above table in the form $K_t = a(d/w)^b$ gives the result $a = \exp(0.204\ 521\ 2) = 1.227$, $b = -0.935$, and $r^2 = 0.9947$. Thus

$$K_t = 1.227 \left(\frac{d}{w} \right)^{-0.935} \quad (e)$$

which is a decreasing monotone (and unexciting). However, from Eq. (d),

$$K'_t = \frac{1.227}{1 - d/w} \left(\frac{d}{w} \right)^{-0.935} \quad (f)$$

Form another table from Eq. (f):

d/w	0.15	0.20	0.25	0.30	0.35	0.40	0.45	0.50	0.55	0.60
K'_t	8.507	6.907	5.980	5.403	5.038	4.817	4.707	4.692	4.769	4.946

which shows a stationary-point minimum for K'_t . This can be found by differentiating Eq. (f) with respect to d/w and setting it equal to zero:

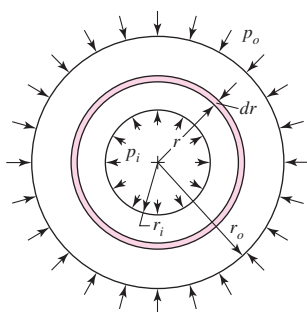
$$\frac{dK'_t}{d(d/w)} = \frac{(1 - d/w)ab(d/w)^{b-1} + a(d/w)^b}{[1 - (d/w)]^2} = 0$$

where $b = -0.935$, from which

$$\left(\frac{d}{w} \right)^* = \frac{b}{b - 1} = \frac{-0.935}{-0.935 - 1} = 0.483$$

with a corresponding K'_t of 4.687. Knowing the section $w \times t$ lets the designer specify the strongest lug immediately by specifying a pin diameter of $0.483w$ (or, as a rule of thumb, of half the width). The theoretical K_t data in the original form, or a plot based on the data using net area, would not suggest this. The right viewpoint can suggest valuable insights.

3-14 Stresses in Pressurized Cylinders

**Figure 3-31**

A cylinder subjected to both internal and external pressure.

Cylindrical pressure vessels, hydraulic cylinders, gun barrels, and pipes carrying fluids at high pressures develop both radial and tangential stresses with values that depend upon the radius of the element under consideration. In determining the radial stress σ_r and the tangential stress σ_t , we make use of the assumption that the longitudinal elongation is constant around the circumference of the cylinder. In other words, a right section of the cylinder remains plane after stressing.

Referring to Fig. 3-31, we designate the inside radius of the cylinder by r_i , the outside radius by r_o , the internal pressure by p_i , and the external pressure by p_o . Then it can be shown that tangential and radial stresses exist whose magnitudes are⁹

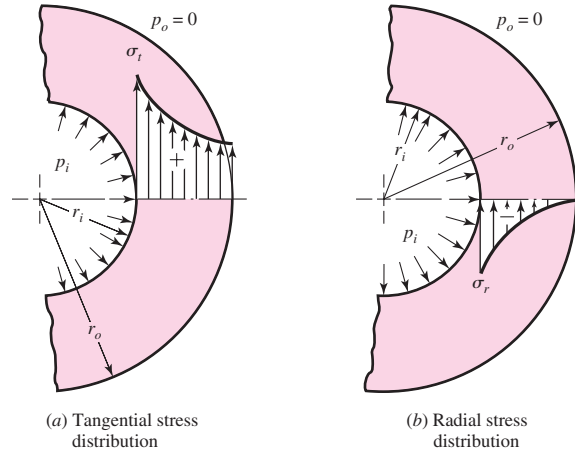
$$\sigma_t = \frac{p_i r_i^2 - p_o r_o^2 - r_i^2 r_o^2 (p_o - p_i) / r^2}{r_o^2 - r_i^2} \quad (3-49)$$

$$\sigma_r = \frac{p_i r_i^2 - p_o r_o^2 + r_i^2 r_o^2 (p_o - p_i) / r^2}{r_o^2 - r_i^2}$$

⁹See Richard G. Budynas, *Advanced Strength and Applied Stress Analysis*, 2nd ed., McGraw-Hill, New York, 1999, pp. 348–352.

Figure 3–32

Distribution of stresses in a thick-walled cylinder subjected to internal pressure.



As usual, positive values indicate tension and negative values, compression.

The special case of $p_o = 0$ gives

$$\begin{aligned}\sigma_t &= \frac{r_i^2 p_i}{r_o^2 - r_i^2} \left(1 + \frac{r_o^2}{r^2} \right) \\ \sigma_r &= \frac{r_i^2 p_i}{r_o^2 - r_i^2} \left(1 - \frac{r_o^2}{r^2} \right)\end{aligned}\quad (3-50)$$

The equations of set (3–50) are plotted in Fig. 3–32 to show the distribution of stresses over the wall thickness. It should be realized that longitudinal stresses exist when the end reactions to the internal pressure are taken by the pressure vessel itself. This stress is found to be

$$\sigma_l = \frac{p_i r_i^2}{r_o^2 - r_i^2} \quad (3-51)$$

We further note that Eqs. (3–49), (3–50), and (3–51) apply only to sections taken a significant distance from the ends and away from any areas of stress concentration.

Thin-Walled Vessels

When the wall thickness of a cylindrical pressure vessel is about one-twentieth, or less, of its radius, the radial stress that results from pressurizing the vessel is quite small compared with the tangential stress. Under these conditions the tangential stress can be obtained as follows: Let an internal pressure p be exerted on the wall of a cylinder of thickness t and inside diameter d_i . The force tending to separate two halves of a unit length of the cylinder is $p d_i$. This force is resisted by the tangential stress, also called the *hoop stress*, acting uniformly over the stressed area. We then have $p d_i = 2t \sigma_t$, or

$$(\sigma_t)_{av} = \frac{p d_i}{2t} \quad (3-52)$$

This equation gives the *average* tangential stress and is valid regardless of the wall thickness. For a thin-walled vessel an approximation to the maximum tangential stress is

$$(\sigma_t)_{max} = \frac{p(d_i + t)}{2t} \quad (3-53)$$

where $d_i + t$ is the average diameter.

In a closed cylinder, the longitudinal stress σ_l exists because of the pressure upon the ends of the vessel. If we assume this stress is also distributed uniformly over the wall thickness, we can easily find it to be

$$\sigma_l = \frac{pd_i}{4t} \quad (3-54)$$

EXAMPLE 3-14

An aluminum-alloy pressure vessel is made of tubing having an outside diameter of 8 in and a wall thickness of $\frac{1}{4}$ in.

(a) What pressure can the cylinder carry if the permissible tangential stress is 12 kpsi and the theory for thin-walled vessels is assumed to apply?

(b) On the basis of the pressure found in part (a), compute all of the stress components using the theory for thick-walled cylinders.

Solution

(a) Here $d_i = 8 - 2(0.25) = 7.5$ in, $r_i = 7.5/2 = 3.75$ in, and $r_o = 8/2 = 4$ in. Then $t/r_i = 0.25/3.75 = 0.067$. Since this ratio is greater than $\frac{1}{20}$, the theory for thin-walled vessels may not yield safe results.

We first solve Eq. (3-53) to obtain the allowable pressure. This gives

Answer

$$p = \frac{2t(\sigma_t)_{\max}}{d_i + t} = \frac{2(0.25)(12)(10)^3}{7.5 + 0.25} = 774 \text{ psi}$$

Then, from Eq. (3-54), we find the average longitudinal stress to be

$$\sigma_l = \frac{pd_i}{4t} = \frac{774(7.5)}{4(0.25)} = 5810 \text{ psi}$$

(b) The maximum tangential stress will occur at the inside radius, and so we use $r = r_i$ in the first equation of Eq. (3-50). This gives

Answer

$$(\sigma_t)_{\max} = \frac{r_i^2 p_i}{r_o^2 - r_i^2} \left(1 + \frac{r_o^2}{r_i^2} \right) = p_i \frac{r_o^2 + r_i^2}{r_o^2 - r_i^2} = 774 \frac{4^2 + 3.75^2}{4^2 - 3.75^2} = 12\,000 \text{ psi}$$

Similarly, the maximum radial stress is found, from the second equation of Eq. (3-50) to be

Answer

$$\sigma_r = -p_i = -774 \text{ psi}$$

Equation (3-51) gives the longitudinal stress as

Answer

$$\sigma_l = \frac{p_i r_i^2}{r_o^2 - r_i^2} = \frac{774(3.75)^2}{4^2 - 3.75^2} = 5620 \text{ psi}$$

These three stresses, σ_t , σ_r , and σ_l , are principal stresses, since there is no shear on these surfaces. Note that there is no significant difference in the tangential stresses in parts (a) and (b), and so the thin-wall theory can be considered satisfactory.

3-15 Stresses in Rotating Rings

Many rotating elements, such as flywheels and blowers, can be simplified to a rotating ring to determine the stresses. When this is done it is found that the same tangential and radial stresses exist as in the theory for thick-walled cylinders except that they are caused by inertial forces acting on all the particles of the ring. The tangential and radial stresses so found are subject to the following restrictions:

- The outside radius of the ring, or disk, is large compared with the thickness $r_o \geq 10t$.
- The thickness of the ring or disk is constant.
- The stresses are constant over the thickness.

The stresses are¹⁰

$$\begin{aligned}\sigma_t &= \rho\omega^2 \left(\frac{3+\nu}{8} \right) \left(r_i^2 + r_o^2 + \frac{r_i^2 r_o^2}{r^2} - \frac{1+3\nu}{3+\nu} r^2 \right) \\ \sigma_r &= \rho\omega^2 \left(\frac{3+\nu}{8} \right) \left(r_i^2 + r_o^2 - \frac{r_i^2 r_o^2}{r^2} - r^2 \right)\end{aligned}\tag{3-55}$$

where r is the radius to the stress element under consideration, ρ is the mass density, and ω is the angular velocity of the ring in radians per second. For a rotating disk, use $r_i = 0$ in these equations.

3-16 Press and Shrink Fits

When two cylindrical parts are assembled by shrinking or press fitting one part upon another, a contact pressure is created between the two parts. The stresses resulting from this pressure may easily be determined with the equations of the preceding sections.

Figure 3-33 shows two cylindrical members that have been assembled with a shrink fit. Prior to assembly, the outer radius of the inner member was larger than the inner radius of the outer member by the *radial interference* δ . After assembly, an interference contact pressure p develops between the members at the nominal radius R , causing radial stresses $\sigma_r = -p$ in each member at the contacting surfaces. This pressure is given by¹¹

$$p = \frac{\delta}{R \left[\frac{1}{E_o} \left(\frac{r_o^2 + R^2}{r_o^2 - R^2} + \nu_o \right) + \frac{1}{E_i} \left(\frac{R^2 + r_i^2}{R^2 - r_i^2} - \nu_i \right) \right]}\tag{3-56}$$

where the subscripts o and i on the material properties correspond to the outer and inner members, respectively. If the two members are of the same material with $E_o = E_i = E$, $\nu_o = \nu_i$, the relation simplifies to

$$p = \frac{E\delta}{2R^3} \left[\frac{(r_o^2 - R^2)(R^2 - r_i^2)}{r_o^2 - r_i^2} \right]\tag{3-57}$$

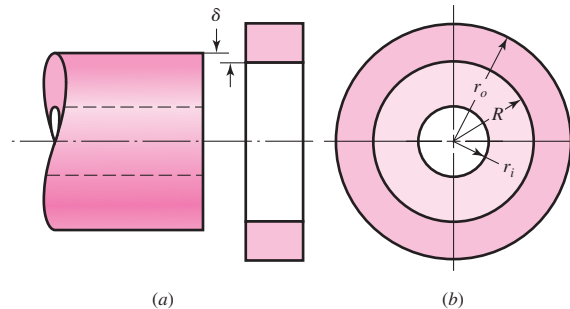
For Eqs. (3-56) or (3-57), diameters can be used in place of R , r_i , and r_o , provided δ is the diametral interference (twice the radial interference).

¹⁰Ibid, pp. 348–357.

¹¹Ibid, pp. 348–354.

Figure 3–33

Notation for press and shrink fits. (a) Unassembled parts; (b) after assembly.



With p , Eq. (3–49) can be used to determine the radial and tangential stresses in each member. For the inner member, $p_o = p$ and $p_i = 0$. For the outer member, $p_o = 0$ and $p_i = p$. For example, the magnitudes of the tangential stresses at the transition radius R are maximum for both members. For the inner member

$$(\sigma_t)_i \Big|_{r=R} = -p \frac{R^2 + r_i^2}{R^2 - r_i^2} \quad (3-58)$$

and, for the outer member

$$(\sigma_t)_o \Big|_{r=R} = p \frac{r_o^2 + R^2}{r_o^2 - R^2} \quad (3-59)$$

Assumptions

It is assumed that both members have the same length. In the case of a hub that has been press-fitted onto a shaft, this assumption would not be true, and there would be an increased pressure at each end of the hub. It is customary to allow for this condition by employing a stress-concentration factor. The value of this factor depends upon the contact pressure and the design of the female member, but its theoretical value is seldom greater than 2.

3–17 Temperature Effects

When the temperature of an unrestrained body is uniformly increased, the body expands, and the normal strain is

$$\epsilon_x = \epsilon_y = \epsilon_z = \alpha(\Delta T) \quad (3-60)$$

where α is the coefficient of thermal expansion and ΔT is the temperature change, in degrees. In this action the body experiences a simple volume increase with the components of shear strain all zero.

If a straight bar is restrained at the ends so as to prevent lengthwise expansion and then is subjected to a uniform increase in temperature, a compressive stress will develop because of the axial constraint. The stress is

$$\sigma = -\epsilon E = -\alpha(\Delta T)E \quad (3-61)$$

In a similar manner, if a uniform flat plate is restrained at the edges and also subjected to a uniform temperature rise, the compressive stress developed is given by the equation

$$\sigma = -\frac{\alpha(\Delta T)E}{1 - \nu} \quad (3-62)$$

Table 3–3

Coefficients of Thermal
Expansion (Linear Mean
Coefficients for the
Temperature Range 0–100°C)

Material	Celsius Scale ($^{\circ}\text{C}^{-1}$)	Fahrenheit Scale ($^{\circ}\text{F}^{-1}$)
Aluminum	$23.9(10)^{-6}$	$13.3(10)^{-6}$
Brass, cast	$18.7(10)^{-6}$	$10.4(10)^{-6}$
Carbon steel	$10.8(10)^{-6}$	$6.0(10)^{-6}$
Cast iron	$10.6(10)^{-6}$	$5.9(10)^{-6}$
Magnesium	$25.2(10)^{-6}$	$14.0(10)^{-6}$
Nickel steel	$13.1(10)^{-6}$	$7.3(10)^{-6}$
Stainless steel	$17.3(10)^{-6}$	$9.6(10)^{-6}$
Tungsten	$4.3(10)^{-6}$	$2.4(10)^{-6}$

The stresses expressed by Eqs. (3–61) and (3–62) are called *thermal stresses*. They arise because of a temperature change in a clamped or restrained member. Such stresses, for example, occur during welding, since parts to be welded must be clamped before welding. Table 3–3 lists approximate values of the coefficients of thermal expansion.

3–18 Curved Beams in Bending

The distribution of stress in a curved flexural member is determined by using the following assumptions:

- The cross section has an axis of symmetry in a plane along the length of the beam.
- Plane cross sections remain plane after bending.
- The modulus of elasticity is the same in tension as in compression.

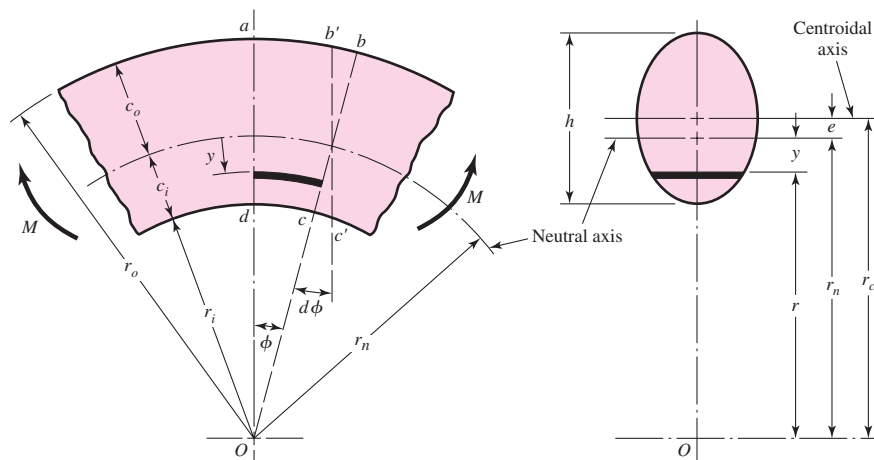
We shall find that the neutral axis and the centroidal axis of a curved beam, unlike the axes of a straight beam, are not coincident and also that the stress does not vary linearly from the neutral axis. The notation shown in Fig. 3–34 is defined as follows:

r_o = radius of outer fiber

r_i = radius of inner fiber

Figure 3–34

Note that y is positive in the direction toward the center of curvature, point O .



- h = depth of section
 c_o = distance from neutral axis to outer fiber
 c_i = distance from neutral axis to inner fiber
 r_n = radius of neutral axis
 r_c = radius of centroidal axis
 e = distance from centroidal axis to neutral axis
 M = bending moment; positive M decreases curvature

Figure 3–34 shows that the neutral and centroidal axes are not coincident.¹² It turns out that the location of the neutral axis with respect to the center of curvature O is given by the equation

$$r_n = \frac{A}{\int \frac{dA}{r}} \quad (3-63)$$

The stress distribution can be found by balancing the external applied moment against the internal resisting moment. The result is found to be

$$\sigma = \frac{My}{Ae(r_n - y)} \quad (3-64)$$

where M is positive in the direction shown in Fig. 3–34. Equation (3–63) shows that the stress distribution is hyperbolic. The critical stresses occur at the inner and outer surfaces where $y = c_i$ and $y = -c_o$, respectively, and are

$$\sigma_i = \frac{Mc_i}{Aer_i} \quad \sigma_o = -\frac{Mc_o}{Aer_o} \quad (3-65)$$

These equations are valid for pure bending. In the usual and more general case, such as a crane hook, the U frame of a press, or the frame of a clamp, the bending moment is due to forces acting to one side of the cross section under consideration. In this case the bending moment is computed about the *centroidal axis*, not the neutral axis. Also, an additional axial tensile or compressive stress must be added to the bending stresses given by Eqs. (3–64) and (3–65) to obtain the resultant stresses acting on the section.

¹²For a complete development of the relations in this section, see Richard G. Budynas, *Advanced Strength and Applied Stress Analysis*, 2nd ed., McGraw-Hill, New York, 1999, pp. 309–317.

EXAMPLE 3-15

Plot the distribution of stresses across section A-A of the crane hook shown in Fig. 3–35a. The cross section is rectangular, with $b = 0.75$ in and $h = 4$ in, and the load is $F = 5000$ lbf.

Solution

Since $A = bh$, we have $dA = b dr$ and, from Eq. (3–63),

$$r_n = \frac{A}{\int \frac{dA}{r}} = \frac{bh}{\int_{r_i}^{r_o} \frac{b}{r} dr} = \frac{h}{\ln \frac{r_o}{r_i}} \quad (1)$$

From Fig. 3–35*b*, we see that $r_i = 2$ in, $r_o = 6$ in, $r_c = 4$ in, and $A = 3$ in². Thus, from Eq. (1),

$$r_n = \frac{h}{\ln(r_o/r_i)} = \frac{4}{\ln \frac{6}{2}} = 3.641 \text{ in}$$

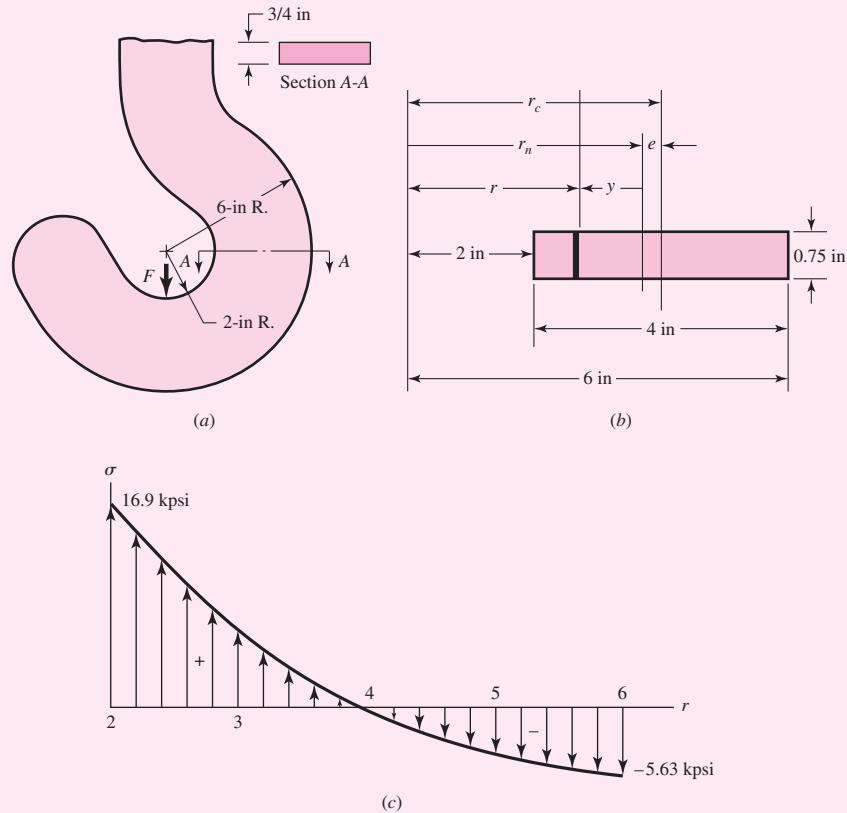
and so the eccentricity is $e = r_c - r_n = 4 - 3.641 = 0.359$ in. The moment M is positive and is $M = Fr_c = 5000(4) = 20\,000$ lbf · in. Adding the axial component of stress to Eq. (3–64) gives

$$\sigma = \frac{F}{A} + \frac{My}{Ae(r_n - y)} = \frac{5000}{3} + \frac{(20\,000)(3.641 - r)}{3(0.359)r} \quad (2)$$

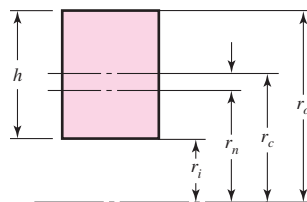
Substituting values of r from 2 to 6 in results in the stress distribution shown in Fig. 3–35*c*. The stresses at the inner and outer radii are found to be 16.9 and -5.63 kpsi, respectively, as shown.

Figure 3–35

- (a) Plan view of crane hook;
 - (b) cross section and notation;
 - (c) resulting stress distribution.
- There is no stress concentration.

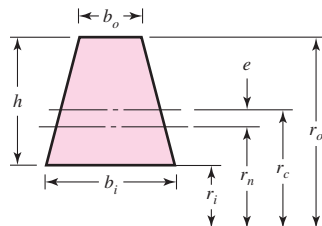


Note in the hook example, the symmetrical rectangular cross section causes the maximum tensile stress to be 3 times greater than the maximum compressive stress. If we wanted to design the hook to use material more effectively we would use more material at the inner radius and less material at the outer radius. For this reason, trapezoidal, T, or unsymmetric I, cross sections are commonly used. Sections most frequently encountered in the stress analysis of curved beams are shown in Table 3–4.

Table 3-4Formulas for Sections of
Curved Beams

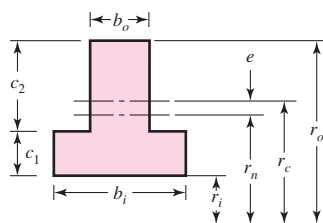
$$r_c = r_i + \frac{h}{2}$$

$$r_n = \frac{h}{\ln(r_o/r_i)}$$



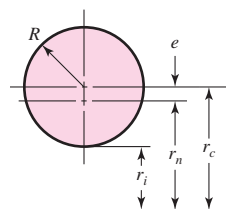
$$r_c = r_i + \frac{h}{3} \frac{b_i + 2b_o}{b_i + b_o}$$

$$r_n = \frac{A}{b_o - b_i + [(b_i r_o - b_o r_i)/h] \ln(r_o/r_i)}$$



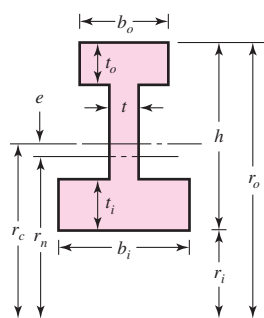
$$r_c = r_i + \frac{b_i c_1^2 + 2b_o c_1 c_2 + b_o c_2^2}{2(b_o c_2 + b_i c_1)}$$

$$r_n = \frac{b_i c_1 + b_o c_2}{b_i \ln[(r_i + c_1)/r_i] + b_o \ln[r_o/(r_i + c_1)]}$$



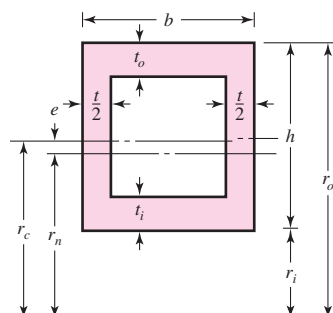
$$r_c = r_i + R$$

$$r_n = \frac{R^2}{2(r_c - \sqrt{r_c^2 - R^2})}$$



$$r_c = r_i + \frac{\frac{1}{2}h^2t + \frac{1}{2}t_i^2(b_i - t) + t_o(b_o - t)(h - t_o/2)}{t_i(b_i - t) + t_o(b_o - t) + ht}$$

$$r_n = \frac{t_i(b_i - t) + t_o(b_o - t) + ht_o}{b_i \ln \frac{r_i + t}{r_i} + t \ln \frac{r_o - t_o}{r_i + t_i} + b_o \ln \frac{r_o}{r_o - t_o}}$$



$$r_c = r_i + \frac{\frac{1}{2}h^2t + \frac{1}{2}t_i^2(b - t) + t_o(b - t)(h - t_o/2)}{ht + (b - t)(t_i + t_o)}$$

$$r_n = \frac{(b - t)(t_i + t_o) + ht}{b \left(\ln \frac{r_i + t_i}{r_i} + \ln \frac{r_o}{r_o - t_o} \right) + t \ln \frac{r_o - t_o}{r_i + t_i}}$$

Alternative Calculations for e

Calculating r_n and r_c mathematically and subtracting the difference can lead to large errors if not done carefully, since r_n and r_c are typically large values compared to e . Since e is in the denominator of Eqs. (3–64) and (3–65), a large error in e can lead to an inaccurate stress calculation. Furthermore, if you have a complex cross section that the tables do not handle, alternative methods for determining e are needed. For a quick and simple approximation of e , it can be shown that¹³

$$e \doteq \frac{I}{r_c A} \quad (3-66)$$

This approximation is good for a large curvature where e is small with $r_n \doteq r_c$. Substituting Eq. (3–66) into Eq. (3–64), with $r_n - y = r$, gives

$$\sigma \doteq \frac{My r_c}{I r} \quad (3-67)$$

If $r_n \doteq r_c$, which it should be to use Eq. (3–67), then it is only necessary to calculate r_c , and to measure y from this axis. Determining r_c for a complex cross section can be done easily by most CAD programs or numerically as shown in the before mentioned reference. Observe that as the curvature increases, $r \rightarrow r_c$, and Eq. (3–67) becomes the straight-beam formulation, Eq. (3–24). Note that the negative sign is missing because y in Fig. 3–34 is vertically downward, opposite that for the straight-beam equation.

¹³Ibid., pp 317–321. Also presents a numerical method.

EXAMPLE 3–16

Consider the circular section in Table 3–4 with $r_c = 3$ in and $R = 1$ in. Determine e by using the formula from the table and approximately by using Eq. (3–66). Compare the results of the two solutions.

Solution Using the formula from Table 3–4 gives

$$r_n = \frac{R^2}{2(r_c - \sqrt{r_c^2 - R^2})} = \frac{1^2}{2(3 - \sqrt{3^2 - 1})} = 2.91421 \text{ in}$$

This gives an eccentricity of

$$\text{Answer} \quad e = r_c - r_n = 3 - 2.91421 = 0.08579 \text{ in}$$

The approximate method, using Eq. (3–66), yields

$$\text{Answer} \quad e \doteq \frac{I}{r_c A} = \frac{\pi R^4/4}{r_c(\pi R^2)} = \frac{R^2}{4r_c} = \frac{1^2}{4(3)} = 0.08333 \text{ in}$$

This differs from the exact solution by –2.9 percent.

3-19 Contact Stresses

When two bodies having curved surfaces are pressed together, point or line contact changes to area contact, and the stresses developed in the two bodies are three-dimensional. Contact-stress problems arise in the contact of a wheel and a rail, in automotive valve cams and tappets, in mating gear teeth, and in the action of rolling bearings. Typical failures are seen as cracks, pits, or flaking in the surface material.

The most general case of contact stress occurs when each contacting body has a double radius of curvature; that is, when the radius in the plane of rolling is different from the radius in a perpendicular plane, both planes taken through the axis of the contacting force. Here we shall consider only the two special cases of contacting spheres and contacting cylinders.¹⁴ The results presented here are due to Hertz and so are frequently known as *Hertzian stresses*.

Spherical Contact

When two solid spheres of diameters d_1 and d_2 are pressed together with a force F , a circular area of contact of radius a is obtained. Specifying E_1 , ν_1 and E_2 , ν_2 as the respective elastic constants of the two spheres, the radius a is given by the equation

$$a = \sqrt[3]{\frac{3F}{8} \frac{(1 - \nu_1^2)/E_1 + (1 - \nu_2^2)/E_2}{1/d_1 + 1/d_2}} \quad (3-68)$$

The pressure distribution within the contact area of each sphere is hemispherical, as shown in Fig. 3-36*b*. The maximum pressure occurs at the center of the contact area and is

$$p_{\max} = \frac{3F}{2\pi a^2} \quad (3-69)$$

Equations (3-68) and (3-69) are perfectly general and also apply to the contact of a sphere and a plane surface or of a sphere and an internal spherical surface. For a plane surface, use $d = \infty$. For an internal surface, the diameter is expressed as a negative quantity.

The maximum stresses occur on the z axis, and these are principal stresses. Their values are

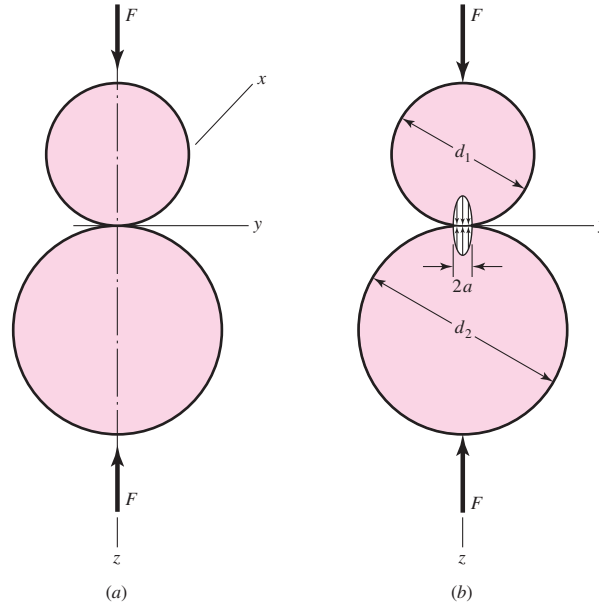
$$\sigma_1 = \sigma_2 = \sigma_x = \sigma_y = -p_{\max} \left[\left(1 - \left| \frac{z}{a} \right| \tan^{-1} \frac{1}{|z/a|} \right) (1 + \nu) - \frac{1}{2 \left(1 + \frac{z^2}{a^2} \right)} \right] \quad (3-70)$$

$$\sigma_3 = \sigma_z = \frac{-p_{\max}}{1 + \frac{z^2}{a^2}} \quad (3-71)$$

¹⁴A more comprehensive presentation of contact stresses may be found in Arthur P. Boresi and Richard J. Schmidt, *Advanced Mechanics of Materials*, 6th ed., Wiley, New York, 2003 pp. 589–623.

Figure 3–36

(a) Two spheres held in contact by force F ; (b) contact stress has a hemispherical distribution across contact zone diameter $2a$.



These equations are valid for either sphere, but the value used for Poisson's ratio must correspond with the sphere under consideration. The equations are even more complicated when stress states off the z axis are to be determined, because here the x and y coordinates must also be included. But these are not required for design purposes, because the maxima occur on the z axis.

Mohr's circles for the stress state described by Eqs. (3–70) and (3–71) are a point and two coincident circles. Since $\sigma_1 = \sigma_2$, we have $\tau_{1/2} = 0$ and

$$\tau_{\max} = \tau_{1/3} = \tau_{2/3} = \frac{\sigma_1 - \sigma_3}{2} = \frac{\sigma_2 - \sigma_3}{2} \quad (3-72)$$

Figure 3–37 is a plot of Eqs. (3–70), (3–71), and (3–72) for a distance to $3a$ below the surface. Note that the shear stress reaches a maximum value slightly below the surface. It is the opinion of many authorities that this maximum shear stress is responsible for the surface fatigue failure of contacting elements. The explanation is that a crack originates at the point of maximum shear stress below the surface and progresses to the surface and that the pressure of the lubricant wedges the chip loose.

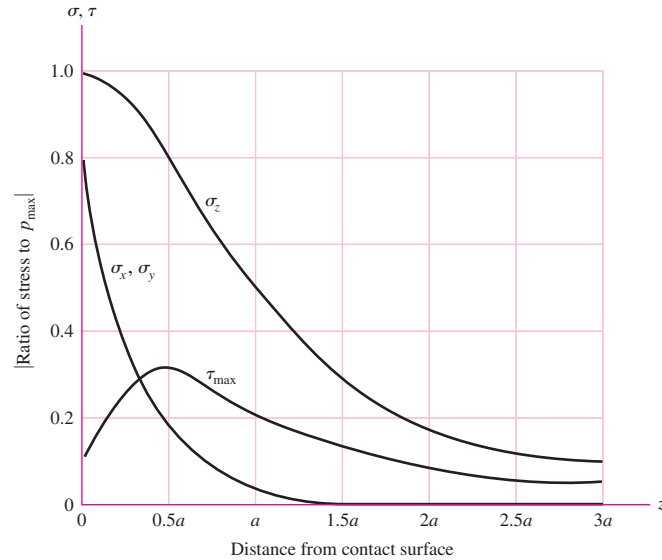
Cylindrical Contact

Figure 3–38 illustrates a similar situation in which the contacting elements are two cylinders of length l and diameters d_1 and d_2 . As shown in Fig. 3–38b, the area of contact is a narrow rectangle of width $2b$ and length l , and the pressure distribution is elliptical. The half-width b is given by the equation

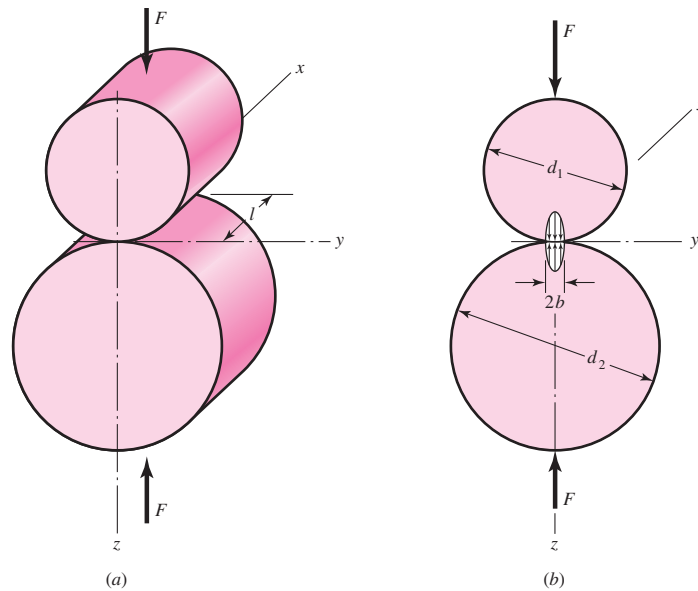
$$b = \sqrt{\frac{2F(1 - \nu_1^2)/E_1 + (1 - \nu_2^2)/E_2}{\pi l (1/d_1 + 1/d_2)}} \quad (3-73)$$

Figure 3-37

Magnitude of the stress components below the surface as a function of the maximum pressure of contacting spheres. Note that the maximum shear stress is slightly below the surface at $z = 0.48a$ and is approximately $0.3p_{\max}$. The chart is based on a Poisson ratio of 0.30. Note that the normal stresses are all compressive stresses.

**Figure 3-38**

(a) Two right circular cylinders held in contact by forces F uniformly distributed along cylinder length l . (b) Contact stress has an elliptical distribution across the contact zone width $2b$.



The maximum pressure is

$$p_{\max} = \frac{2F}{\pi bl} \quad (3-74)$$

Equations (3-73) and (3-74) apply to a cylinder and a plane surface, such as a rail, by making $d = \infty$ for the plane surface. The equations also apply to the contact of a cylinder and an internal cylindrical surface; in this case d is made negative for the internal surface.

The stress state along the z axis is given by the equations

$$\sigma_x = -2\nu p_{\max} \left(\sqrt{1 + \frac{z^2}{b^2}} - \left| \frac{z}{b} \right| \right) \quad (3-75)$$

$$\sigma_y = -p_{\max} \left(\frac{1 + 2\frac{z^2}{b^2}}{\sqrt{1 + \frac{z^2}{b^2}}} - 2 \left| \frac{z}{b} \right| \right) \quad (3-76)$$

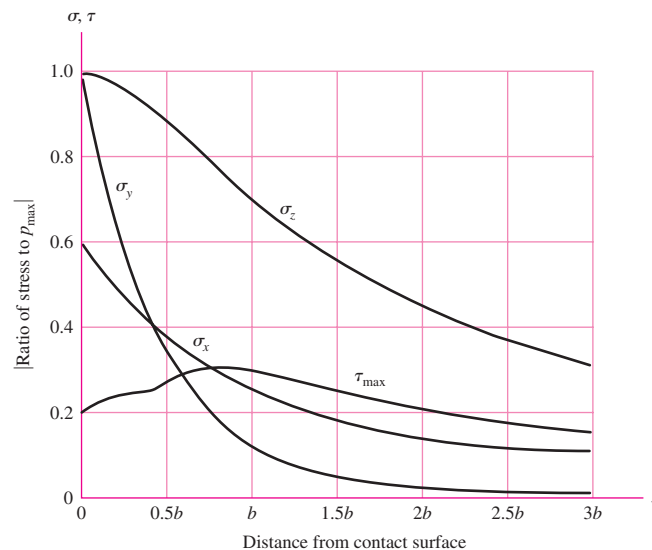
$$\sigma_3 = \sigma_z = \frac{-p_{\max}}{\sqrt{1 + z^2/b^2}} \quad (3-77)$$

These three equations are plotted in Fig. 3–39 up to a distance of $3b$ below the surface. For $0 \leq z \leq 0.436b$, $\sigma_1 = \sigma_x$, and $\tau_{\max} = (\sigma_1 - \sigma_3)/2 = (\sigma_x - \sigma_z)/2$. For $z \geq 0.436b$, $\sigma_1 = \sigma_y$, and $\tau_{\max} = (\sigma_y - \sigma_z)/2$. A plot of τ_{\max} is also included in Fig. 3–39, where the greatest value occurs at $z/b = 0.786$ with a value of $0.300 p_{\max}$.

Hertz (1881) provided the preceding mathematical models of the stress field when the contact zone is free of shear stress. Another important contact stress case is *line of contact* with friction providing the shearing stress on the contact zone. Such shearing stresses are small with cams and rollers, but in cams with flatfaced followers, wheel-rail contact, and gear teeth, the stresses are elevated above the Hertzian field. Investigations of the effect on the stress field due to normal and shear stresses in the contact zone were begun theoretically by Lundberg (1939), and continued by Mindlin (1949), Smith-Liu (1949), and Poritsky (1949) independently. For further detail, see the reference cited in Footnote 14.

Figure 3-39

Magnitude of the stress components below the surface as a function of the maximum pressure for contacting cylinders. The largest value of τ_{\max} occurs at $z/b = 0.786$. Its maximum value is $0.30p_{\max}$. The chart is based on a Poisson ratio of 0.30. Note that all normal stresses are compressive stresses.



3–20 Summary

The ability to quantify the stress condition at a critical location in a machine element is an important skill of the engineer. Why? Whether the member fails or not is assessed by comparing the (damaging) stress at a critical location with the corresponding material strength at this location. This chapter has addressed the description of stress.

Stresses can be estimated with great precision where the geometry is sufficiently simple that theory easily provides the necessary quantitative relationships. In other cases, approximations are used. There are numerical approximations such as finite element analysis (FEA, see Chap. 19), whose results tend to converge on the true values. There are experimental measurements, strain gauging, for example, allowing *inference* of stresses from the measured strain conditions. Whatever the method(s), the goal is a robust description of the stress condition at a critical location.

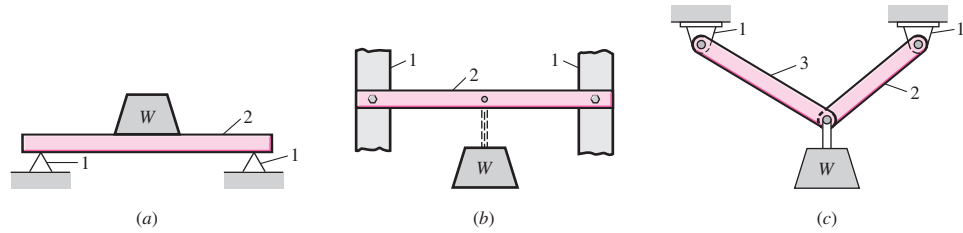
The nature of research results and understanding in any field is that the longer we work on it, the more involved things seem to be, and new approaches are sought to help with the complications. As newer schemes are introduced, engineers, hungry for the improvement the new approach *promises*, begin to use the approach. Optimism usually recedes, as further experience adds concerns. Tasks that promised to extend the capabilities of the nonexpert eventually show that expertise is not optional.

In stress analysis, the computer can be helpful if the necessary equations are available. Spreadsheet analysis can quickly reduce complicated calculations for parametric studies, easily handling “what if” questions relating trade-offs (e.g., less of a costly material or more of a cheaper material). It can even give insight into optimization opportunities.

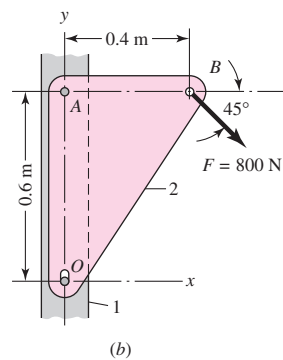
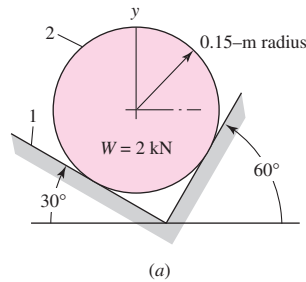
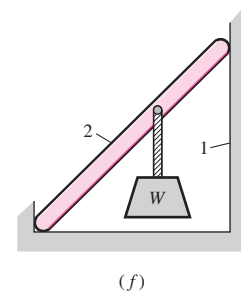
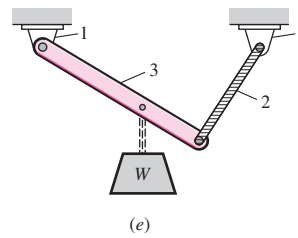
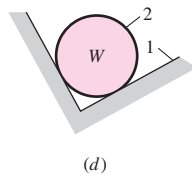
When the necessary equations are not available, then methods such as FEA are attractive, but cautions are in order. Even when you have access to a powerful FEA code, you should be near an expert while you are learning. There are nagging questions of convergence at discontinuities. Elastic analysis is much easier than elastic-plastic analysis. The results are no better than the modeling of reality that was used to formulate the problem. Chapter 19 provides an idea of what finite-element analysis is and how it can be used in design. The chapter is by no means comprehensive in finite-element theory and the application of finite elements in practice. Both skill sets require much exposure and experience to be adept.

PROBLEMS

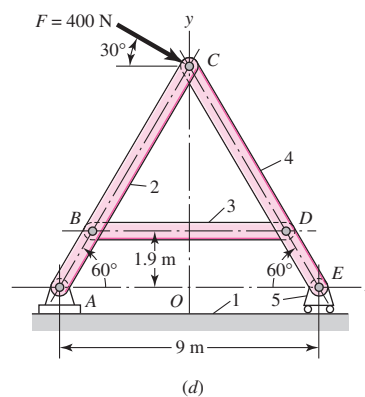
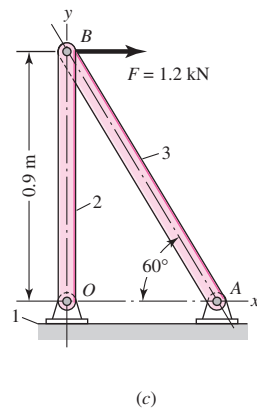
- 3–1** The symbol W is used in the various figure parts to specify the weight of an element. If not given, assume the parts are weightless. For each figure part, sketch a free-body diagram of each element, including the frame. Try to get the forces in the proper directions, but do not compute magnitudes.
- 3–2** Using the figure part selected by your instructor, sketch a free-body diagram of each element in the figure. Compute the magnitude and direction of each force using an algebraic or vector method, as specified.
- 3–3** Find the reactions at the supports and plot the shear-force and bending-moment diagrams for each of the beams shown in the figure on page 123. Label the diagrams properly.



Problem 3-1

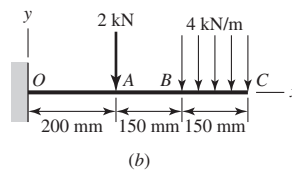
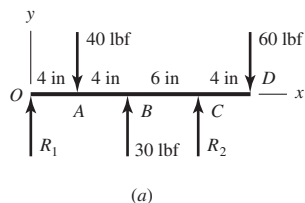


Problem 3-2

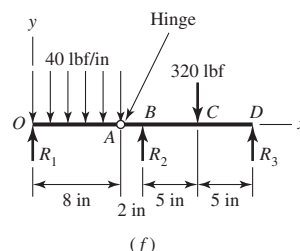
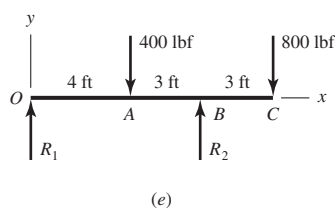
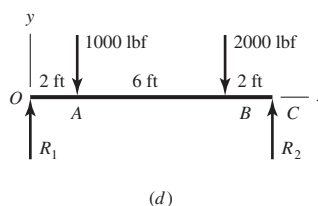
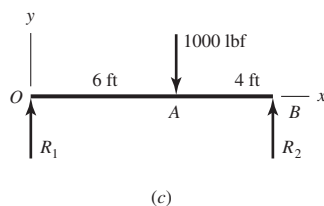


3-4 Repeat Prob. 3-3 using singularity functions exclusively (for reactions as well).

3-5 Select a beam from Table A-9 and find general expressions for the loading, shear-force, bending-moment, and support reactions. Use the method specified by your instructor.



Problem 3-3

**3-6**

A beam carrying a uniform load is simply supported with the supports set back a distance a from the ends as shown in the figure. The bending moment at x can be found from summing moments to zero at section x :

$$\sum M = M + \frac{1}{2}w(a+x)^2 - \frac{1}{2}wlx = 0$$

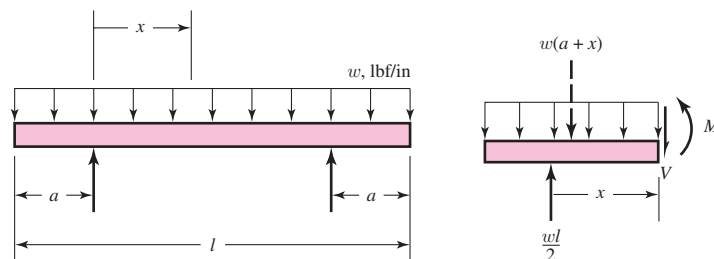
or

$$M = \frac{w}{2}[lx - (a+x)^2]$$

where w is the loading intensity in lbf/in. The designer wishes to minimize the necessary weight of the supporting beam by choosing a setback resulting in the smallest possible maximum bending stress.

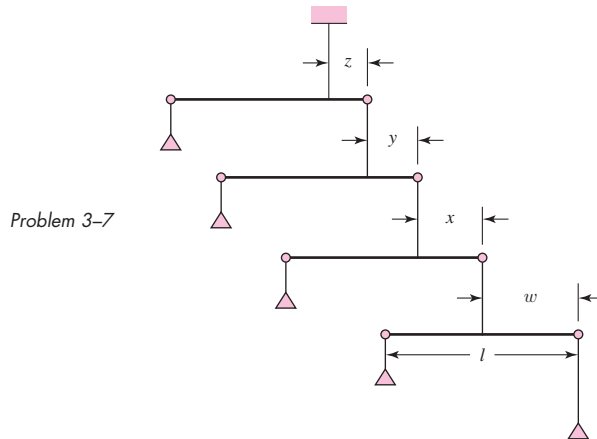
- If the beam is configured with $a = 2.25$ in, $l = 10$ in, and $w = 100$ lbf/in, find the magnitude of the severest bending moment in the beam.
- Since the configuration in part (a) is not optimal, find the optimal setback a that will result in the lightest-weight beam.

Problem 3-6



3-7 An artist wishes to construct a mobile using pendants, string, and span wire with eyelets as shown in the figure.

- (a) At what positions w , x , y , and z should the suspension strings be attached to the span wires?
 (b) Is the mobile stable? If so, justify; if not, suggest a remedy.



3-8 For each of the plane stress states listed below, draw a Mohr's circle diagram properly labeled, find the principal normal and shear stresses, and determine the angle from the x axis to σ_1 . Draw stress elements as in Fig. 3-11 *c* and *d* and label all details.

- (a) $\sigma_x = 12$, $\sigma_y = 6$, $\tau_{xy} = 4$ cw
 (b) $\sigma_x = 16$, $\sigma_y = 9$, $\tau_{xy} = 5$ ccw
 (c) $\sigma_x = 10$, $\sigma_y = 24$, $\tau_{xy} = 6$ ccw
 (d) $\sigma_x = 9$, $\sigma_y = 19$, $\tau_{xy} = 8$ cw

3-9 Repeat Prob. 3-8 for:

- (a) $\sigma_x = -4$, $\sigma_y = 12$, $\tau_{xy} = 7$ ccw
 (b) $\sigma_x = 6$, $\sigma_y = -5$, $\tau_{xy} = 8$ ccw
 (c) $\sigma_x = -8$, $\sigma_y = 7$, $\tau_{xy} = 6$ cw
 (d) $\sigma_x = 9$, $\sigma_y = -6$, $\tau_{xy} = 3$ cw

3-10 Repeat Prob. 3-8 for:

- (a) $\sigma_x = 20$, $\sigma_y = -10$, $\tau_{xy} = 8$ cw
 (b) $\sigma_x = 30$, $\sigma_y = -10$, $\tau_{xy} = 10$ ccw
 (c) $\sigma_x = -10$, $\sigma_y = 18$, $\tau_{xy} = 9$ cw
 (d) $\sigma_x = -12$, $\sigma_y = 22$, $\tau_{xy} = 12$ cw

3-11 For each of the stress states listed below, find all three principal normal and shear stresses. Draw a complete Mohr's three-circle diagram and label all points of interest.

- (a) $\sigma_x = 10$, $\sigma_y = -4$
 (b) $\sigma_x = 10$, $\tau_{xy} = 4$ ccw
 (c) $\sigma_x = -2$, $\sigma_y = -8$, $\tau_{xy} = 4$ cw
 (d) $\sigma_x = 10$, $\sigma_y = -30$, $\tau_{xy} = 10$ ccw

3-12 Repeat Prob. 3-11 for:

- (a) $\sigma_x = -80$, $\sigma_y = -30$, $\tau_{xy} = 20$ cw
 (b) $\sigma_x = 30$, $\sigma_y = -60$, $\tau_{xy} = 30$ cw
 (c) $\sigma_x = 40$, $\sigma_z = -30$, $\tau_{xy} = 20$ ccw
 (d) $\sigma_x = 50$, $\sigma_z = -20$, $\tau_{xy} = 30$ cw

- 3-13** A $\frac{1}{2}$ -in.-diameter steel tension rod is 72 in long and carries a load of 2000 lbf. Find the tensile stress, the total deformation, the unit strains, and the change in the rod diameter.
- 3-14** Twin diagonal aluminum alloy tension rods 15 mm in diameter are used in a rectangular frame to prevent collapse. The rods can safely support a tensile stress of 135 MPa. If the rods are initially 3 m in length, how much must they be stretched to develop this stress?
- 3-15** Electrical strain gauges were applied to a notched specimen to determine the stresses in the notch. The results were $\epsilon_x = 0.0021$ and $\epsilon_y = -0.00067$. Find σ_x and σ_y if the material is carbon steel.
- 3-16** An engineer wishes to determine the shearing strength of a certain epoxy cement. The problem is to devise a test specimen such that the joint is subject to pure shear. The joint shown in the figure, in which two bars are offset at an angle θ so as to keep the loading force F centroidal with the straight shanks, seems to accomplish this purpose. Using the contact area A and designating S_{su} as the *ultimate shearing strength*, the engineer obtains

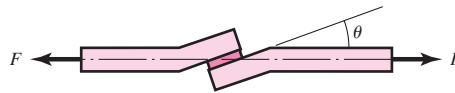
$$S_{su} = \frac{F}{A} \cos \theta$$

The engineer's supervisor, in reviewing the test results, says the expression should be

$$S_{su} = \frac{F}{A} \left(1 + \frac{1}{4} \tan^2 \theta \right)^{1/2} \cos \theta$$

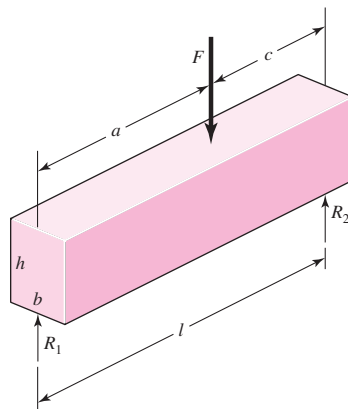
Resolve the discrepancy. What is your position?

Problem 3-16



- 3-17** The state of stress at a point is $\sigma_x = -2$, $\sigma_y = 6$, $\sigma_z = -4$, $\tau_{xy} = 3$, $\tau_{yz} = 2$, and $\tau_{zx} = -5$ kpsi. Determine the principal stresses, draw a complete Mohr's three-circle diagram, labeling all points of interest, and report the maximum shear stress for this case.
- 3-18** Repeat Prob. 3-17 with $\sigma_x = 10$, $\sigma_y = 0$, $\sigma_z = 10$, $\tau_{xy} = 20$, $\tau_{yz} = -10\sqrt{2}$, and $\tau_{zx} = 0$ MPa.
- 3-19** Repeat Prob. 3-17 with $\sigma_x = 1$, $\sigma_y = 4$, $\sigma_z = 4$, $\tau_{xy} = 2$, $\tau_{yz} = -4$, and $\tau_{zx} = -2$ kpsi.
- 3-20** The Roman method for addressing uncertainty in design was to build a copy of a design that was satisfactory and had proven durable. Although the early Romans did not have the intellectual tools to deal with scaling size up or down, you do. Consider a simply supported, rectangular-cross-section beam with a concentrated load F , as depicted in the figure.

Problem 3-20



(a) Show that the stress-to-load equation is

$$F = \frac{\sigma b h^2 l}{6ac}$$

(b) Subscript every parameter with m (for model) and divide into the above equation. Introduce a scale factor, $s = a_m/a = b_m/b = c_m/c$ etc. Since the Roman method was to not “lean on” the material any more than the proven design, set $\sigma_m/\sigma = 1$. Express F_m in terms of the scale factors and F , and comment on what you have learned.

3-21

Using our experience with concentrated loading on a simple beam, Prob. 3-20, consider a uniformly loaded simple beam (Table A-9-7).

(a) Show that the stress-to-load equation for a rectangular-cross-section beam is given by

$$W = \frac{4}{3} \frac{\sigma b h^2}{l}$$


where $W = wl$.

(b) Subscript every parameter with m (for model) and divide the model equation into the prototype equation. Introduce the scale factor s as in Prob. 3-20, setting $\sigma_m/\sigma = 1$. Express W_m and w_m in terms of the scale factor, and comment on what you have learned.

3-22

The Chicago North Shore & Milwaukee Railroad was an electric railway running between the cities in its corporate title. It had passenger cars as shown in the figure, which weighed 104.4 kip, had 32-ft, 8-in truck centers, 7-ft-wheelbase trucks, and a coupled length of 55 ft, $3\frac{1}{4}$ in. Consider the case of a single car on a 100-ft-long, simply supported deck plate girder bridge.

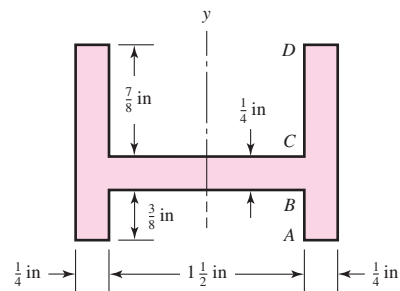
- (a) What was the largest bending moment in the bridge?
- (b) Where on the bridge was the moment located?
- (c) What was the position of the car on the bridge?
- (d) Under which axle is the bending moment?



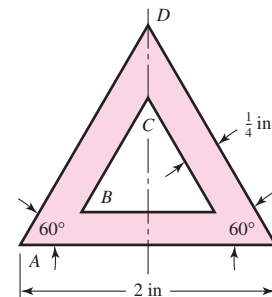
Problem 3-22

Copyright 1963 by Central Electric Railfans Association, Bull. 107, p. 145, reproduced by permission.

- 3–23** For each section illustrated, find the second moment of area, the location of the neutral axis, and the distances from the neutral axis to the top and bottom surfaces. Suppose a positive bending moment of $10 \text{ kip} \cdot \text{in}$ is applied; find the resulting stresses at the top and bottom surfaces and at every abrupt change in cross section.

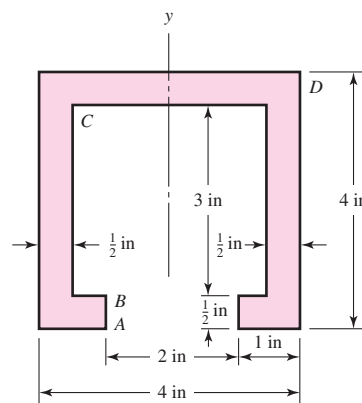


(a)

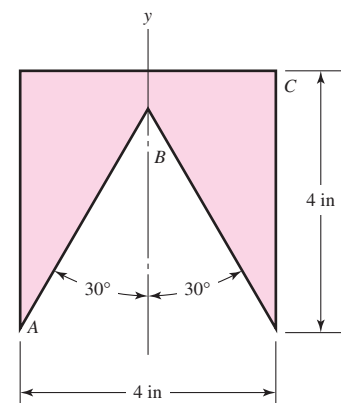


(b)

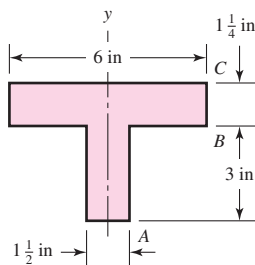
Problem 3–23



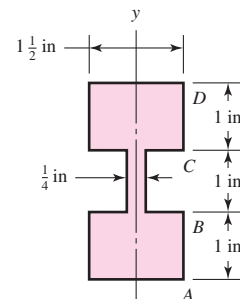
(c)



(d)

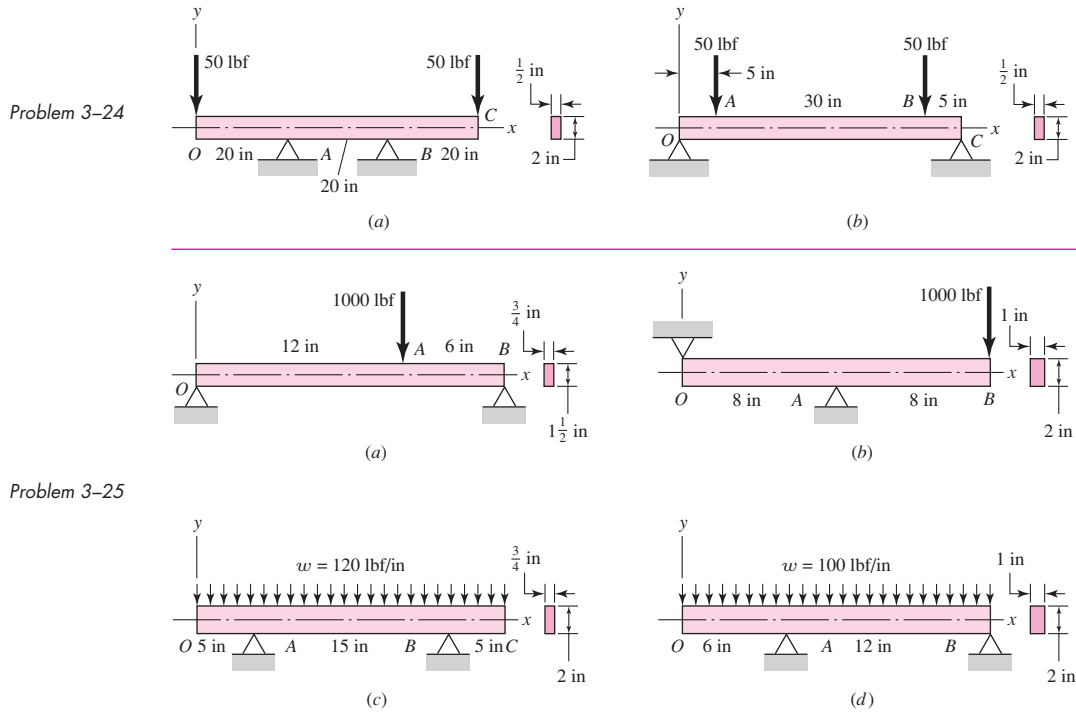


(e)



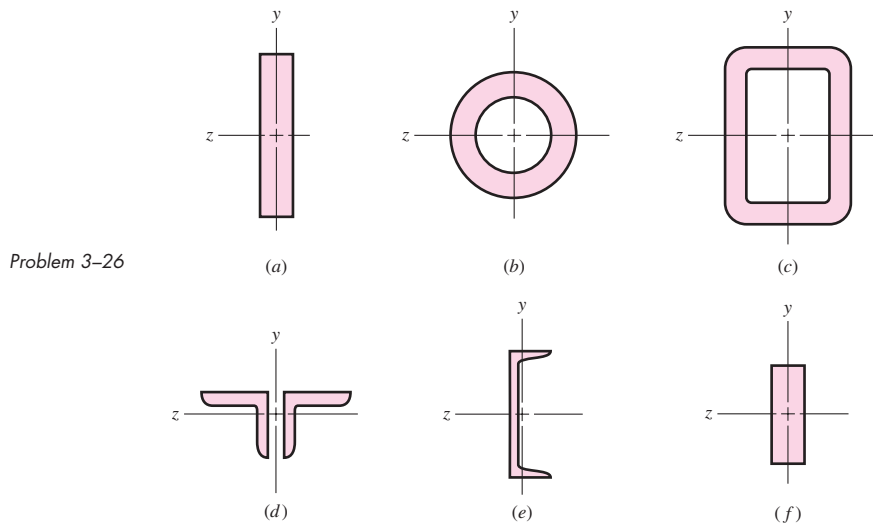
(f)

- 3–24** From basic mechanics of materials, in the derivation of the bending stresses, it is found that the radius of curvature of the neutral axis, ρ , is given by $\rho = EI/M$. Find the x and y coordinates of the center of curvature corresponding to the place where the beam is bent the most, for each beam shown in the figure. The beams are both made of Douglas fir (see Table A–5) and have rectangular sections.
- 3–25** For each beam illustrated in the figure, find the locations and magnitudes of the maximum tensile bending stress and the maximum shear stress due to V .



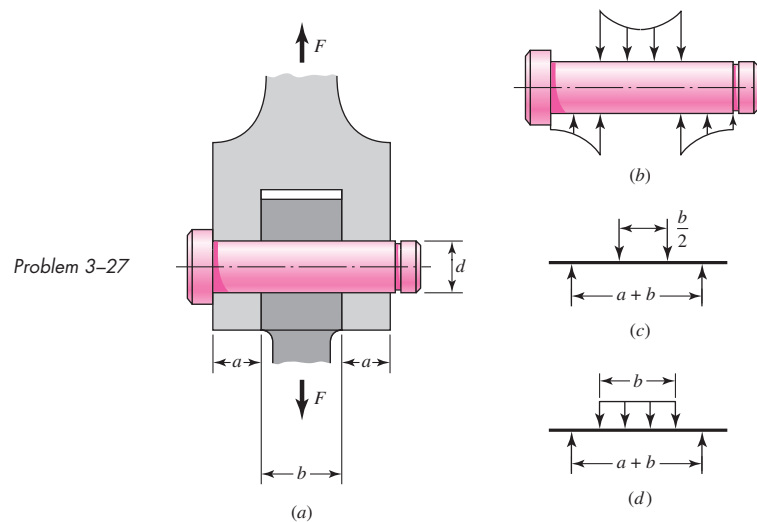
3–26 The figure illustrates a number of beam sections. Use an allowable bending stress of 1.2 kpsi for wood and 12 kpsi for steel and find the maximum safe uniformly distributed load that each beam can carry if the given lengths are between simple supports.

- (a) Wood joist $1\frac{1}{2}$ by $9\frac{1}{2}$ in and 12 ft long
- (b) Steel tube, 2 in OD by $\frac{3}{8}$ -in wall thickness, 48 in long
- (c) Hollow steel tube 3 by 2 in, outside dimensions, formed from $\frac{3}{16}$ -in material and welded, 48 in long
- (d) Steel angles $3 \times 3 \times \frac{1}{4}$ in and 72 in long
- (e) A 5.4-lb, 4-in steel channel, 72 in long
- (f) A 4-in \times 1-in steel bar, 72 in long

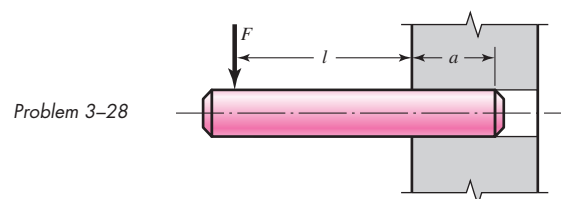


3-27

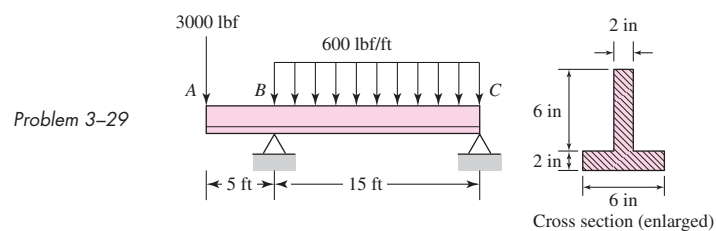
A pin in a knuckle joint carrying a tensile load F deflects somewhat on account of this loading, making the distribution of reaction and load as shown in part b of the figure. The usual designer's assumption of loading is shown in part c ; others sometimes choose the loading shown in part d . If $a = 0.5$ in, $b = 0.75$ in, $d = 0.5$ in, and $F = 1000$ lbf, estimate the maximum bending stress and the maximum shear stress due to V for each approximation.

**3-28**

The figure illustrates a pin tightly fitted into a hole of a substantial member. A usual analysis is one that assumes concentrated reactions R and M at distance l from F . Suppose the reaction is distributed linearly along distance a . Is the resulting moment reaction larger or smaller than the concentrated reaction? What is the loading intensity q ? What do you think of using the usual assumption?

**3-29**

For the beam shown, determine (a) the maximum tensile and compressive bending stresses, (b) the maximum shear stress due to V , and (c) the maximum shear stress in the beam.



- 3–30** Consider a simply supported beam of rectangular cross section of constant width b and variable depth h , so proportioned that the maximum stress σ_x at the outer surface due to bending is constant, when subjected to a load F at a distance a from the left support and a distance c from the right support. Show that the depth h at location x is given by

$$h = \sqrt{\frac{6Fcx}{lb\sigma_{\max}}} \quad 0 \leq x \leq a$$

- 3–31** In Prob. 3–30, $h \rightarrow 0$ as $x \rightarrow 0$, which cannot occur. If the maximum shear stress τ_{\max} due to direct shear is to be constant in this region, show that the depth h at location x is given by

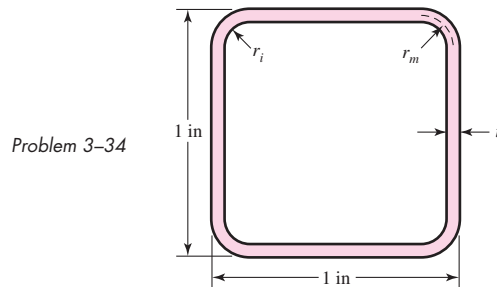
$$h = \frac{3}{2} \frac{Fc}{lb\tau_{\max}} \quad 0 \leq x \leq \frac{3}{8} \frac{Fc\sigma_{\max}}{lb\tau_{\max}^2}$$

- 3–32** Consider a simply supported static beam of circular cross section of diameter d , so proportioned by varying the diameter such that the maximum stress σ_x at the surface due to bending is constant, when subjected to a steady load F located at a distance a from the left support and a distance b from the right support. Show that the diameter d at a location x is given by

$$d = \left(\frac{32Fbx}{\pi l\sigma_{\max}} \right)^{1/3} \quad 0 \leq x \leq a$$

- 3–33** Two steel thin-wall tubes in torsion of equal length are to be compared. The first is of square cross section, side length b , and wall thickness t . The second is a round of diameter b and wall thickness t . The largest allowable shear stress is τ_{all} and is to be the same in both cases. How does the angle of twist per unit length compare in each case?

- 3–34** Begin with a 1-in-square thin-wall steel tube, wall thickness $t = 0.05$ in, length 40 in, then introduce corner radii of inside radii r_i , with allowable shear stress τ_{all} of 11 500 psi, shear modulus of $11.5(10^6)$ psi; now form a table. Use a column of inside corner radii in the range $0 \leq r_i \leq 0.45$ in. Useful columns include median line radius r_m , periphery of the median line L_m , area enclosed by median curve, torque T , and the angular twist θ . The cross section will vary from square to circular round. A computer program will reduce the calculation effort. Study the table. What have you learned?

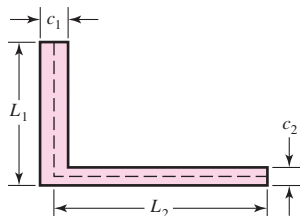


- 3–35** An unequal leg angle shown in the figure carries a torque T . Show that

$$T = \frac{G\theta_1}{3} \sum L_i c_i^3$$

$$\tau_{\max} = G\theta_1 c_{\max}$$

Problem 3–35

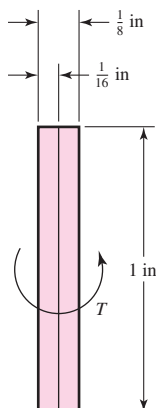


3–36 In Prob. 3–35 the angle has one leg thickness $\frac{1}{16}$ in and the other $\frac{1}{8}$ in, with both leg lengths $\frac{5}{8}$ in. The allowable shear stress is $\tau_{\text{all}} = 12\,000$ psi for this steel angle.

- (a) Find the torque carried by each leg, and the largest shear stress therein.
 (b) Find the angle of twist per unit length of the section.

3–37 Two 12 in long thin rectangular steel strips are placed together as shown. Using a maximum allowable shear stress of 12 000 psi, determine the maximum torque and angular twist, and the torsional spring rate. Compare these with a single strip of cross section 1 in by $\frac{1}{8}$ in.

Problem 3–37



3–38 Using a maximum allowable shear stress of 60 MPa, find the shaft diameter needed to transmit 35 kw when

- (a) The shaft speed is 2000 rev/min.
 (b) The shaft speed is 200 rev/min.

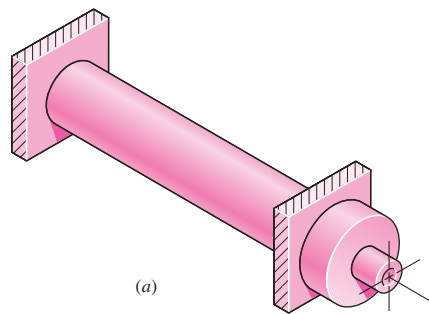
3–39 A 15-mm-diameter steel bar is to be used as a torsion spring. If the torsional stress in the bar is not to exceed 110 MPa when one end is twisted through an angle of 30° , what must be the length of the bar?

3–40 A 3-in-diameter solid steel shaft, used as a torque transmitter, is replaced with a 3-in hollow shaft having a $\frac{1}{4}$ -in wall thickness. If both materials have the same strength, what is the percentage reduction in torque transmission? What is the percentage reduction in shaft weight?

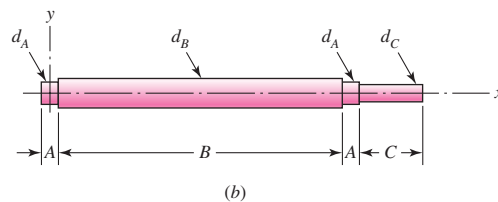
3–41 A hollow steel shaft is to transmit 5400 N · m of torque and is to be sized so that the torsional stress does not exceed 150 MPa.

- (a) If the inside diameter is three-fourths of the outside diameter, what size shaft should be used? Use preferred sizes.
 (b) What is the stress on the inside of the shaft when full torque is applied?

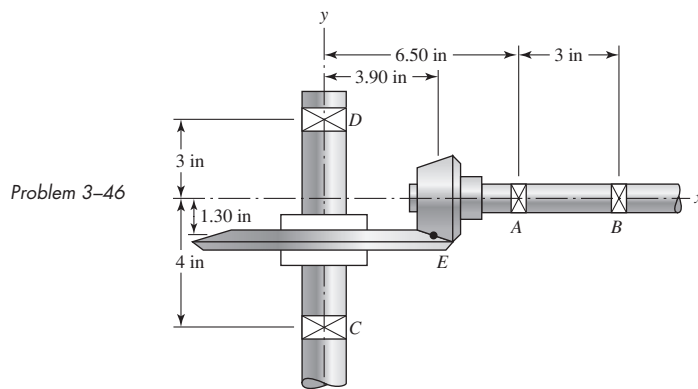
- 3–42** The figure shows an endless-belt conveyor drive roll. The roll has a diameter of 6 in and is driven at 5 rev/min by a geared-motor source rated at 1 hp. Determine a suitable shaft diameter d_C for an allowable torsional stress of 14 kpsi.
- (a) What would be the stress in the shaft you have sized if the motor starting torque is twice the running torque?
- (b) Is bending stress likely to be a problem? What is the effect of different roll lengths B on bending?



Problem 3–42

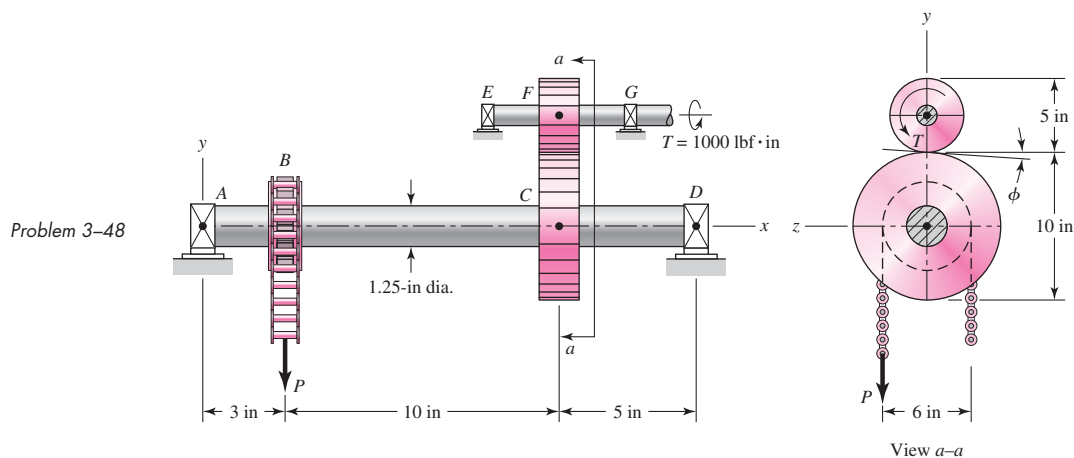


- 3–43** The conveyer drive roll in the figure for Prob. 3–42 is 150 mm in diameter and is driven at 8 rev/min by a geared-motor source rated at 1 kW. Find a suitable shaft diameter d_C based on an allowable torsional stress of 75 MPa.
- 3–44** For the same cross-sectional area $A = s^2 = \pi d^2/4$, for a square cross-sectional area shaft and a circular cross-sectional area shaft, in torsion which has the higher maximum shear stress, and by what multiple is it higher?
- 3–45** For the same cross-sectional area $A = s^2 = \pi d^2/4$, for a square cross-sectional area shaft and a circular cross-sectional area shaft, both of length l , in torsion which has the greater angular twist θ , and by what multiple is it greater?
- 3–46** In the figure, shaft AB is rotating at 1000 rev/min and transmits 10 hp to shaft CD through a set of bevel gears contacting at point E . The contact force at E on the gear of shaft CD is determined to be $(\mathbf{F}_E)_{CD} = -92.8\mathbf{i} - 362.8\mathbf{j} + 808.0\mathbf{k}$ lbf. For shaft CD : (a) draw a free-body diagram and determine the reactions at C and D assuming simple supports (assume also that bearing C is a thrust bearing), (b) draw the shear-force and bending-moment diagrams, and (c) assuming that the shaft diameter is 1.25 in, determine the maximum tensile and shear stresses in the beam.



3–47 Repeat the analysis of Prob. 3–46 for shaft AB . Let the diameter of the shaft be 1.0 in, and assume that bearing A is a thrust bearing.

3–48 A torque of $T = 1000 \text{ lbf} \cdot \text{in}$ is applied to the shaft EFG , which is running at constant speed and contains gear F . Gear F transmits torque to shaft $ABCD$ through gear C , which drives the chain sprocket at B , transmitting a force P as shown. Sprocket B , gear C , and gear F have pitch diameters of 6, 10, and 5 in, respectively. The contact force between the gears is transmitted through the pressure angle $\phi = 20^\circ$. Assuming no frictional losses and considering the bearings at A , D , E , and G to be simple supports, locate the point on shaft $ABCD$ that contains the maximum tensile bending and maximum torsional shear stresses. From this, determine the maximum tensile and shear stresses in the shaft.



3–49 If the tension-loaded plate of Fig. 3–29 is infinitely wide, then the stress state anywhere in the plate can be described in polar coordinates as¹⁵

$$\sigma_r = \frac{1}{2}\sigma \left[1 - \frac{d^2}{4r^2} + \left(1 - \frac{d^2}{4r^2} \right) \left(1 - \frac{3d^2}{4r^2} \right) \cos 2\theta \right]$$

¹⁵ See R. G. Budynas, *Advanced Strength and Applied Stress Analysis*, 2nd ed. McGraw-Hill, New York, 1999, pp. 235–238.

$$\sigma_{\theta} = \frac{1}{2}\sigma \left[1 + \frac{d^2}{4r^2} - \left(1 + \frac{3}{16} \frac{d^4}{r^4} \right) \cos 2\theta \right]$$

$$\tau_{r\theta} = -\frac{1}{2}\sigma \left(1 - \frac{1}{4} \frac{d^2}{r^2} \right) \left(1 + \frac{3}{4} \frac{d^2}{r^2} \right) \sin 2\theta$$

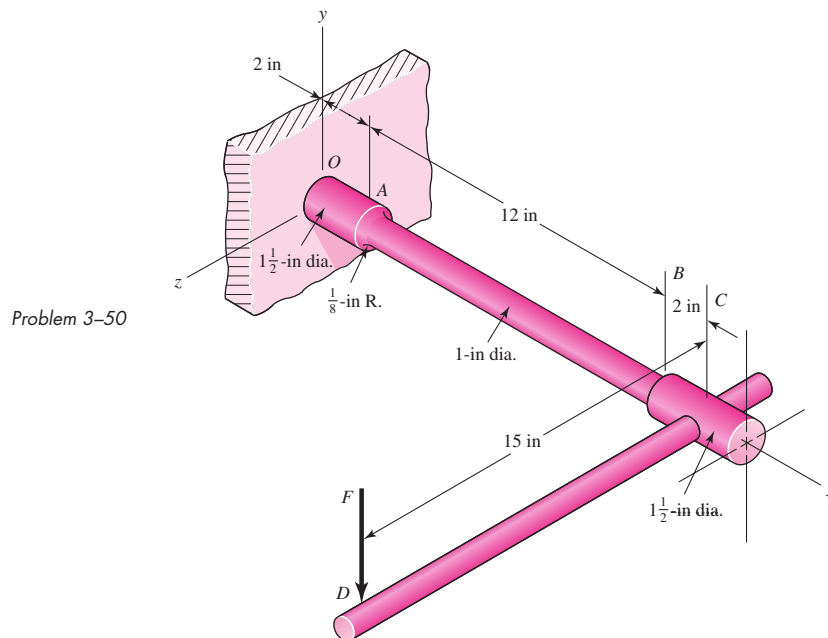
for the radial, tangential, and shear components, respectively. Here r is the distance from the center to the point of interest and θ is measured positive counterclockwise from the horizontal axis.

(a) Find the stress components at the top and side of the hole for $r = d/2$.

(b) If $d = 10$ mm, plot a graph of the tangential stress distribution σ_{θ}/σ for $\theta = 90^\circ$ from $r = 5$ mm to 20 mm.

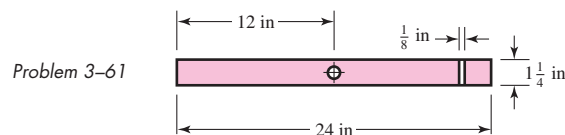
(c) Repeat part (b) for $\theta = 0^\circ$

- 3-50** Considering the stress concentration at point A in the figure, determine the maximum normal and shear stresses at A if $F = 200$ lbf.



- 3-51** Develop the formulas for the maximum radial and tangential stresses in a thick-walled cylinder due to internal pressure only.
- 3-52** Repeat Prob. 3-51 where the cylinder is subject to external pressure only. At what radii do the maximum stresses occur?
- 3-53** Develop the stress relations for a thin-walled spherical pressure vessel.
- 3-54** A pressure cylinder has a diameter of 150 mm and has a 6-mm wall thickness. What pressure can this vessel carry if the maximum shear stress is not to exceed 25 Mpa?
- 3-55** A cylindrical pressure vessel has an outside diameter of 10 in and a wall thickness of $\frac{3}{8}$ in. If the internal pressure is 350 psi, what is the maximum shear stress in the vessel walls?

- 3–56** An AISI 1020 cold-drawn steel tube has an ID of $1\frac{1}{4}$ in and an OD of $1\frac{3}{4}$ in. What maximum external pressure can this tube take if the largest principal normal stress is not to exceed 80 percent of the minimum yield strength of the material?
- 3–57** An AISI 1020 cold-drawn steel tube has an ID of 40 mm and an OD of 50 mm. What maximum internal pressure can this tube take if the largest principal normal stress is not to exceed 80 percent of the minimum yield strength of the material?
- 3–58** Find the maximum shear stress in a 10-in circular saw if it runs idle at 7200 rev/min. The saw is 14 gauge (0.0747 in) and is used on a $\frac{3}{4}$ -in arbor. The thickness is uniform. What is the maximum radial component of stress?
- 3–59** The maximum recommended speed for a 300-mm-diameter abrasive grinding wheel is 2069 rev/min. Assume that the material is isotropic; use a bore of 25 mm, $\nu = 0.24$, and a mass density of 3320 kg/m^3 ; and find the maximum tensile stress at this speed.
- 3–60** An abrasive cutoff wheel has a diameter of 6 in, is $\frac{1}{16}$ in thick, and has a 1-in bore. It weighs 6 oz and is designed to run at 10 000 rev/min. If the material is isotropic and $\nu = 0.20$, find the maximum shear stress at the design speed.
- 3–61** A rotary lawn-mower blade rotates at 3000 rev/min. The steel blade has a uniform cross section $\frac{1}{8}$ in thick by $1\frac{1}{4}$ in wide, and has a $\frac{1}{2}$ -in-diameter hole in the center as shown in the figure. Estimate the nominal tensile stress at the central section due to rotation.



- 3–62 to 3–67** The table lists the maximum and minimum hole and shaft dimensions for a variety of standard press and shrink fits. The materials are both hot-rolled steel. Find the maximum and minimum values of the radial interference and the corresponding interface pressure. Use a collar diameter of 80 mm for the metric sizes and 3 in for those in inch units.

Problem Number	Fit Designation*	Basic Size	Hole		Shaft	
			D_{\max}	D_{\min}	d_{\max}	d_{\min}
3–62	40H7/p6	40 mm	40.025	40.000	40.042	40.026
3–63	(1.5 in)H7/p6	1.5 in	1.5010	1.5000	1.5016	1.5010
3–64	40H7/s6	40 mm	40.025	40.000	40.059	40.043
3–65	(1.5 in)H7/s6	1.5 in	1.5010	1.5000	1.5023	1.5017
3–66	40H7/u6	40 mm	40.025	40.000	40.076	40.060
3–67	(1.5 in)H7/u6	1.5 in	1.5010	1.5000	1.5030	1.5024

*Note: See Table 7–9 for description of fits.

- 3–68 to 3–71** The table gives data concerning the shrink fit of two cylinders of differing materials and dimensional specification in inches. Elastic constants for different materials may be found in Table A–5. Identify the radial interference δ , then find the interference pressure p , and the tangential normal stress on both sides of the fit surface. If dimensional tolerances are given at fit surfaces, repeat the problem for the highest and lowest stress levels.

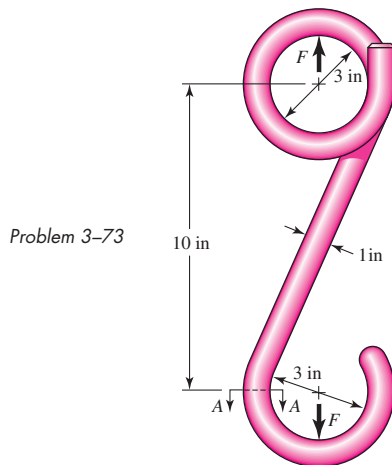
Problem Number	Inner Cylinder			Outer Cylinder		
	Material	d_i	d_o	Material	D_i	D_o
3-68	Steel	0	1.002	Steel	1.000	2.00
3-69	Steel	0	1.002	Cast iron	1.000	2.00
3-70	Steel	0	1.002/1.003	Steel	1.000/1.001	2.00
3-71	Steel	0	2.005/2.003	Aluminum	2.000/2.002	4.00

3-72 Force fits of a shaft and gear are assembled in an air-operated arbor press. An estimate of assembly force and torque capacity of the fit is needed. Assume the coefficient of friction is f , the fit interface pressure is p , the nominal shaft or hole radius is R , and the axial length of the gear bore is l .

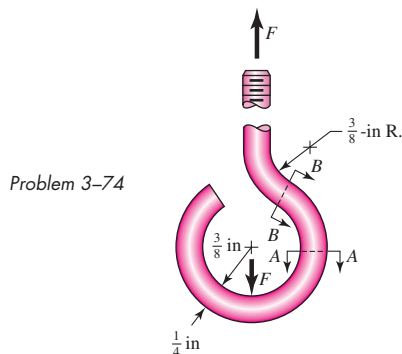
(a) Show that the estimate of the axial force is $F_{ax} = 2\pi f R l p$.

(b) Show the estimate of the torque capacity of the fit is $T = 2\pi f R^2 l p$.

3-73 A utility hook was formed from a 1-in-diameter round rod into the geometry shown in the figure. What are the stresses at the inner and outer surfaces at section A-A if the load F is 1000 lbf?



3-74 The steel eyebolt shown in the figure is loaded with a force F of 100 lbf. The bolt is formed of $\frac{1}{4}$ -in-diameter wire to a $\frac{3}{8}$ -in radius in the eye and at the shank. Estimate the stresses at the inner and outer surfaces at sections A-A and B-B.

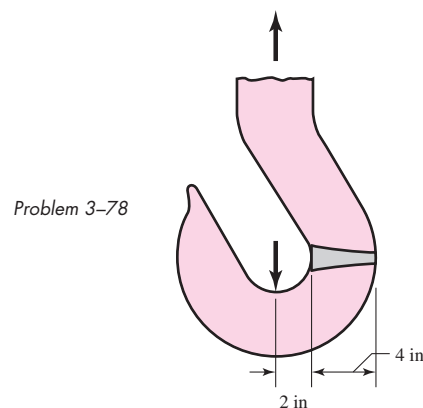
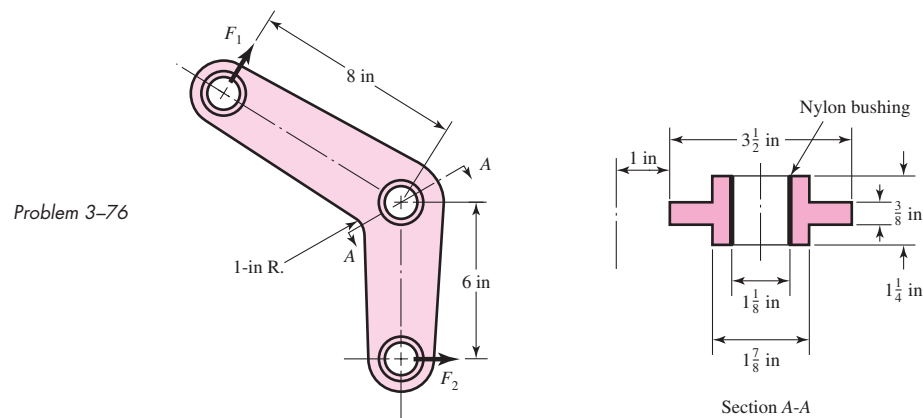
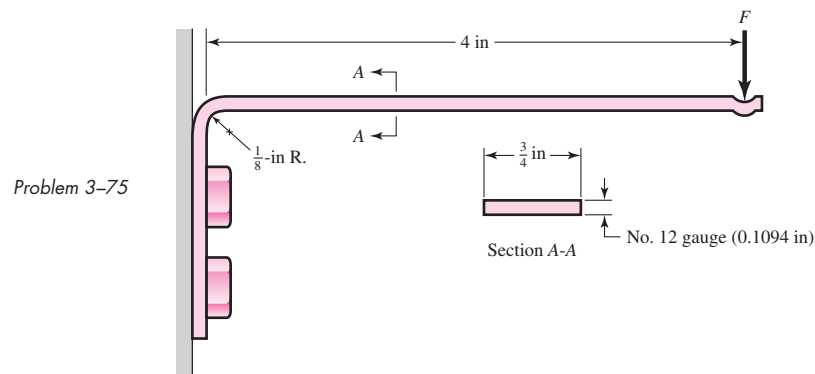


3-75 Shown in the figure is a 12-gauge (0.1094-in) by $\frac{3}{4}$ -in latching spring that supports a load of $F = 3$ lbf. The inside radius of the bend is $\frac{1}{8}$ in. Estimate the stresses at the inner and outer surfaces at the critical section.

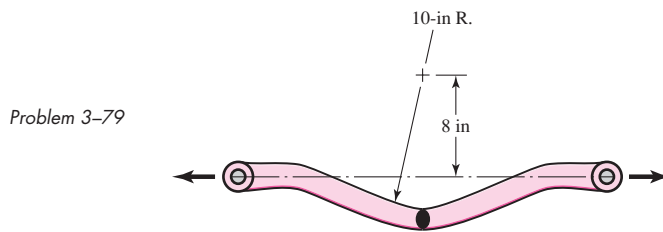
3-76 The cast-iron bell-crank lever depicted in the figure is acted upon by forces F_1 of 250 lbf and F_2 of 333 lbf. The section A-A at the central pivot has a curved inner surface with a radius of $r_i = 1$ in. Estimate the stresses at the inner and outer surfaces of the curved portion of the lever.

3-77 The crane hook depicted in Fig. 3-35 has a 1-in-diameter hole in the center of the critical section. For a load of 5 kip, estimate the bending stresses at the inner and outer surfaces at the critical section.

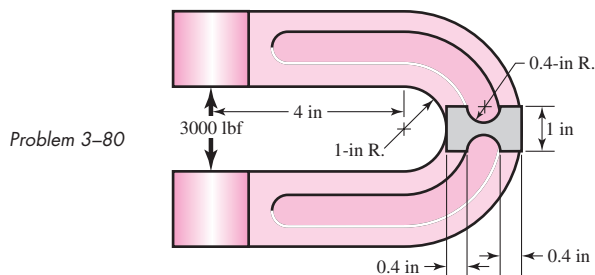
3-78 A 20-kip load is carried by the crane hook shown in the figure. The cross section of the hook uses two concave flanks. The width of the cross section is given by $b = 2/r$, where r is the radius from the center. The inside radius r_i is 2 in, and the outside radius $r_o = 6$ in. Find the stresses at the inner and outer surfaces at the critical section.



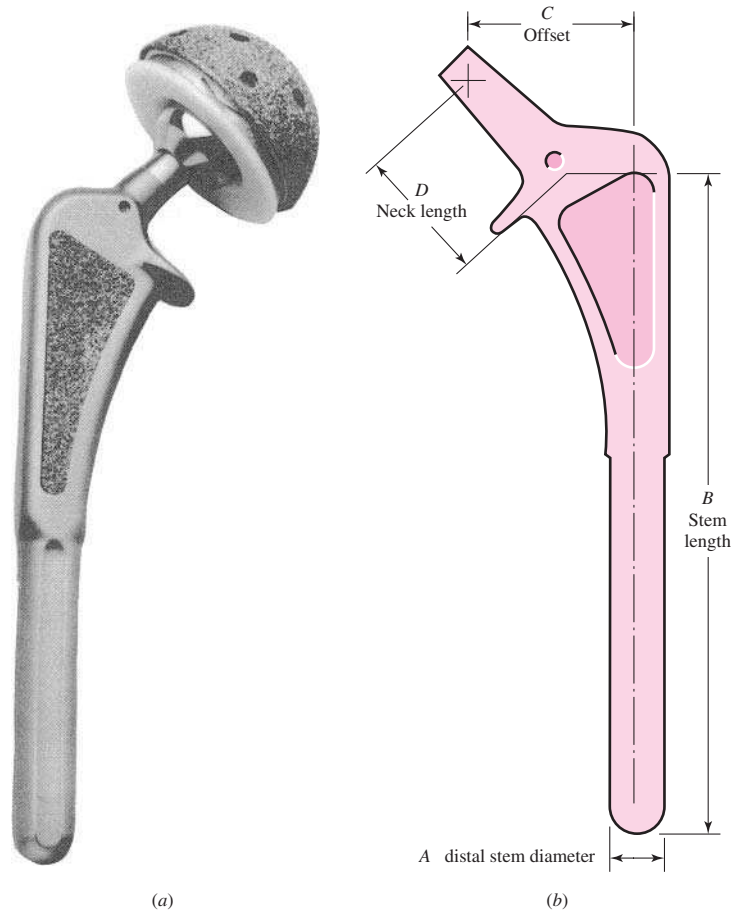
- 3-79** An offset tensile link is shaped to clear an obstruction with a geometry as shown in the figure. The cross section at the critical location is elliptical, with a major axis of 4 in and a minor axis of 2 in. For a load of 20 kip, estimate the stresses at the inner and outer surfaces of the critical section.



- 3-80** A cast-steel C frame as shown in the figure has a rectangular cross section of 1 in by 1.6 in, with a 0.4-in-radius semicircular notch on both sides that forms midflank fluting as shown. Estimate A , r_c , r_n , and e , and for a load of 3000 lbf, estimate the inner and outer surface stresses at the throat C . *Note:* Table 3-4 can be used to determine r_n for this section. From the table, the integral $\int dA/r$ can be evaluated for a rectangle and a circle by evaluating A/r_n for each shape [see Eq. (3-64)]. Subtracting A/r_n of the circle from that of the rectangle yields $\int dA/r$ for the C frame, and r_n can then be evaluated.



- 3-81** Two carbon steel balls, each 25 mm in diameter, are pressed together by a force F . In terms of the force F , find the maximum values of the principal stress, and the maximum shear stress, in MPa.
- 3-82** One of the balls in Prob. 3-81 is replaced by a flat carbon steel plate. If $F = 18$ N, at what depth does the maximum shear stress occur?
- 3-83** An aluminum alloy roller with diameter 1 in and length 2 in rolls on the inside of a cast-iron ring having an inside radius of 4 in, which is 2 in thick. Find the maximum contact force F that can be used if the shear stress is not to exceed 4000 psi.
- 3-84** The figure shows a hip prosthesis containing a stem that is cemented into a reamed cavity in the femur. The cup is cemented and fastened to the hip with bone screws. Shown are porous layers of titanium into which bone tissue will grow to form a longer-lasting bond than that afforded by cement alone. The bearing surfaces are a plastic cup and a titanium femoral head. The lip shown in the figures bears against the cutoff end of the femur to transfer the load to the leg from the hip. Walking will induce several million stress fluctuations per year for an average person, so there is danger that the prosthesis will loosen the cement bonds or that metal cracks may occur because of the many repetitions of stress. Prostheses like this are made in many different sizes. Typical

**Problem 3–84**

Porous hip prosthesis. [Photograph and drawing courtesy of Zimmer, Inc., Warsaw, Indiana.]

dimensions are ball diameter 50 mm, stem diameter 15 mm, stem length 155 mm, offset 38 mm, and neck length 39 mm. Develop an outline to follow in making a complete stress analysis of this prosthesis. Describe the material properties needed, the equations required, and how the loading is to be defined.

3–85 Simplify Eqs. (3–70), (3–71), and (3–72) by setting $z = 0$ and finding σ_x/p_{\max} , σ_y/p_{\max} , σ_z/p_{\max} , and $\tau_{2/3}/p_{\max}$ and, for cast iron, check the ordinate intercepts of the four loci in Fig. 3–37.

3–86 A 6-in-diameter cast-iron wheel, 2 in wide, rolls on a flat steel surface carrying an 800-lbf load.
(a) Find the Hertzian stresses σ_x , σ_y , σ_z , and $\tau_{2/3}$.
(b) What happens to the stresses at a point A that is 0.010 in below the wheel rim surface during a revolution?

4

Deflection and Stiffness

Chapter Outline

- 4-1** Spring Rates **142**
- 4-2** Tension, Compression, and Torsion **143**
- 4-3** Deflection Due to Bending **144**
- 4-4** Beam Deflection Methods **146**
- 4-5** Beam Deflections by Superposition **147**
- 4-6** Beam Deflections by Singularity Functions **150**
- 4-7** Strain Energy **156**
- 4-8** Castigliano's Theorem **158**
- 4-9** Deflection of Curved Members **163**
- 4-10** Statically Indeterminate Problems **168**
- 4-11** Compression Members—General **173**
- 4-12** Long Columns with Central Loading **173**
- 4-13** Intermediate-Length Columns with Central Loading **176**
- 4-14** Columns with Eccentric Loading **176**
- 4-15** Struts or Short Compression Members **180**
- 4-16** Elastic Stability **182**
- 4-17** Shock and Impact **183**
- 4-18** Suddenly Applied Loading **184**

All real bodies deform under load, either elastically or plastically. A body can be sufficiently insensitive to deformation that a presumption of rigidity does not affect an analysis enough to warrant a nonrigid treatment. If the body deformation later proves to be not negligible, then declaring rigidity was a poor decision, not a poor assumption. A wire rope is flexible, but in tension it can be robustly rigid and it distorts enormously under attempts at compressive loading. The same body can be both rigid and nonrigid.

Deflection analysis enters into design situations in many ways. A snap ring, or retaining ring, must be flexible enough to be bent without permanent deformation and assembled with other parts, and then it must be rigid enough to hold the assembled parts together. In a transmission, the gears must be supported by a rigid shaft. If the shaft bends too much, that is, if it is too flexible, the teeth will not mesh properly, and the result will be excessive impact, noise, wear, and early failure. In rolling sheet or strip steel to prescribed thicknesses, the rolls must be crowned, that is, curved, so that the finished product will be of uniform thickness. Thus, to design the rolls it is necessary to know exactly how much they will bend when a sheet of steel is rolled between them. Sometimes mechanical elements must be designed to have a particular force-deflection characteristic. The suspension system of an automobile, for example, must be designed within a very narrow range to achieve an optimum vibration frequency for all conditions of vehicle loading, because the human body is comfortable only within a limited range of frequencies.

The size of a load-bearing component is often determined on deflections, rather than limits on stress.

This chapter considers distortion of single bodies due to geometry (shape) and loading, then, briefly, the behavior of groups of bodies.

4-1 Spring Rates

Elasticity is that property of a material that enables it to regain its original configuration after having been deformed. A *spring* is a mechanical element that exerts a force when deformed. Figure 4-1a shows a straight beam of length l simply supported at the ends and loaded by the transverse force F . The deflection y is linearly related to the force, as long as the elastic limit of the material is not exceeded, as indicated by the graph. This beam can be described as a *linear spring*.

In Fig. 4-1b a straight beam is supported on two cylinders such that the length between supports decreases as the beam is deflected by the force F . A larger force is required to deflect a short beam than a long one, and hence the more this beam is deflected, the stiffer it becomes. Also, the force is not linearly related to the deflection, and hence this beam can be described as a *nonlinear stiffening spring*.

Figure 4-1

(a) A linear spring; (b) a stiffening spring; (c) a softening spring.

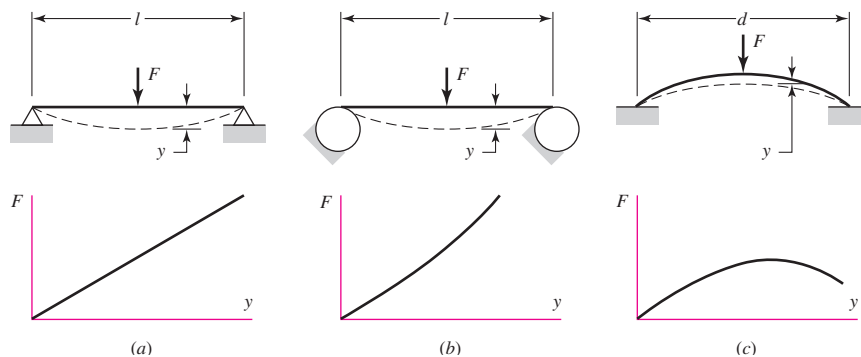


Figure 4–1c is an edge-view of a dish-shaped round disk. The force necessary to flatten the disk increases at first and then decreases as the disk approaches a flat configuration, as shown by the graph. Any mechanical element having such a characteristic is called a *nonlinear softening spring*.

If we designate the general relationship between force and deflection by the equation

$$F = F(y) \quad (a)$$

then *spring rate* is defined as

$$k(y) = \lim_{\Delta y \rightarrow 0} \frac{\Delta F}{\Delta y} = \frac{dF}{dy} \quad (4-1)$$

where y must be measured in the direction of F and at the point of application of F . Most of the force-deflection problems encountered in this book are linear, as in Fig. 4–1a. For these, k is a constant, also called the *spring constant*; consequently Eq. (4–1) is written

$$k = \frac{F}{y} \quad (4-2)$$

We might note that Eqs. (4–1) and (4–2) are quite general and apply equally well for torques and moments, provided angular measurements are used for y . For linear displacements, the units of k are often pounds per inch or newtons per meter, and for angular displacements, pound-inches per radian or newton-meters per radian.

4–2 Tension, Compression, and Torsion

The total extension or contraction of a uniform bar in pure tension or compression, respectively, is given by

$$\delta = \frac{Fl}{AE} \quad (4-3)$$

This equation does not apply to a *long* bar loaded in compression if there is a possibility of buckling (see Secs. 4–11 to 4–15). Using Eqs. (4–2) and (4–3), we see that the spring constant of an axially loaded bar is

$$k = \frac{AE}{l} \quad (4-4)$$

The angular deflection of a uniform round bar subjected to a twisting moment T was given in Eq. (3–35), and is

$$\theta = \frac{Tl}{GJ} \quad (4-5)$$

where θ is in radians. If we multiply Eq. (4–5) by $180/\pi$ and substitute $J = \pi d^4/32$ for a solid round bar, we obtain

$$\theta = \frac{583.6Tl}{Gd^4} \quad (4-6)$$

where θ is in degrees.

Equation (4–5) can be rearranged to give the torsional spring rate as

$$k = \frac{T}{\theta} = \frac{GJ}{l} \quad (4-7)$$

4–3 Deflection Due to Bending

The problem of bending of beams probably occurs more often than any other loading problem in mechanical design. Shafts, axles, cranks, levers, springs, brackets, and wheels, as well as many other elements, must often be treated as beams in the design and analysis of mechanical structures and systems. The subject of bending, however, is one that you should have studied as preparation for reading this book. It is for this reason that we include here only a brief review to establish the nomenclature and conventions to be used throughout this book.

The curvature of a beam subjected to a bending moment M is given by

$$\frac{1}{\rho} = \frac{M}{EI} \quad (4-8)$$

where ρ is the radius of curvature. From studies in mathematics we also learn that the curvature of a plane curve is given by the equation

$$\frac{1}{\rho} = \frac{d^2y/dx^2}{[1 + (dy/dx)^2]^{3/2}} \quad (4-9)$$

where the interpretation here is that y is the lateral deflection of the beam at any point x along its length. The slope of the beam at any point x is

$$\theta = \frac{dy}{dx} \quad (a)$$

For many problems in bending, the slope is very small, and for these the denominator of Eq. (4-9) can be taken as unity. Equation (4-8) can then be written

$$\frac{M}{EI} = \frac{d^2y}{dx^2} \quad (b)$$

Noting Eqs. (3-3) and (3-4) and successively differentiating Eq. (b) yields

$$\frac{V}{EI} = \frac{d^3y}{dx^3} \quad (c)$$

$$\frac{q}{EI} = \frac{d^4y}{dx^4} \quad (d)$$

It is convenient to display these relations in a group as follows:

$$\frac{q}{EI} = \frac{d^4y}{dx^4} \quad (4-10)$$

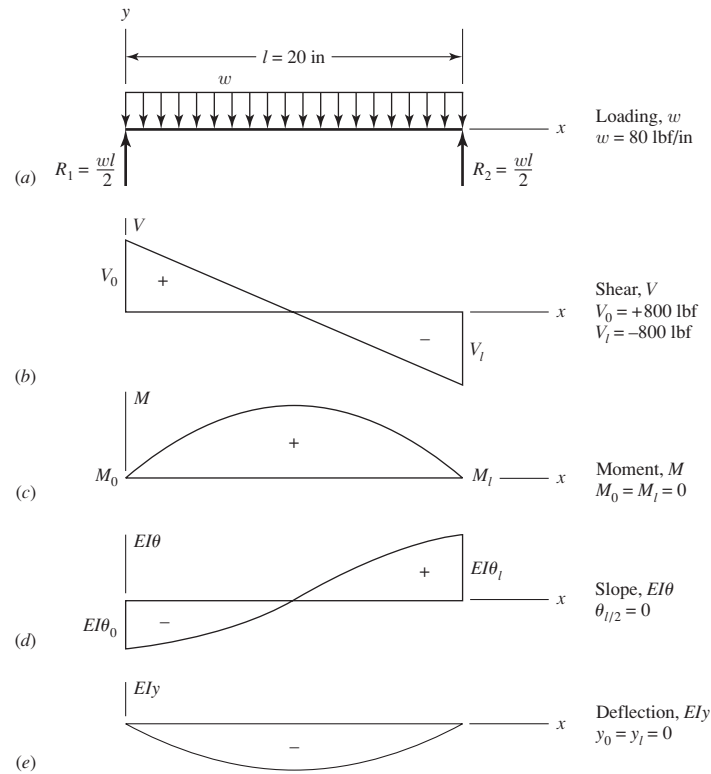
$$\frac{V}{EI} = \frac{d^3y}{dx^3} \quad (4-11)$$

$$\frac{M}{EI} = \frac{d^2y}{dx^2} \quad (4-12)$$

$$\theta = \frac{dy}{dx} \quad (4-13)$$

$$y = f(x) \quad (4-14)$$

Figure 4-2



The nomenclature and conventions are illustrated by the beam of Fig. 4-2. Here, a beam of length $l = 20$ in is loaded by the uniform load $w = 80$ lbf per inch of beam length. The x axis is positive to the right, and the y axis positive upward. All quantities—loading, shear, moment, slope, and deflection—have the same sense as y ; they are positive if upward, negative if downward.

The reactions $R_1 = R_2 = +800$ lbf and the shear forces $V_0 = +800$ lbf and $V_l = -800$ lbf are easily computed by using the methods of Chap. 3. The bending moment is zero at each end because the beam is simply supported. For a simply-supported beam, the deflections are also zero at each end.

EXAMPLE 4-1

For the beam in Fig. 4-2, the bending moment equation, for $0 \leq x \leq l$, is

$$M = \frac{wl}{2}x - \frac{w}{2}x^2$$

Using Eq. (4-12), determine the equations for the slope and deflection of the beam, the slopes at the ends, and the maximum deflection.

Solution

Integrating Eq. (4-12) as an indefinite integral we have

$$EI \frac{dy}{dx} = \int M dx = \frac{wl}{4}x^2 - \frac{w}{6}x^3 + C_1 \quad (1)$$

where C_1 is a constant of integration that is evaluated from geometric boundary conditions. We could impose that the slope is zero at the midspan of the beam, since the beam and

loading are symmetric relative to the midspan. However, we will use the given boundary conditions of the problem and verify that the slope is zero at the midspan. Integrating Eq. (1) gives

$$EIy = \iint M dx = \frac{wl}{12}x^3 - \frac{w}{24}x^4 + C_1x + C_2 \quad (2)$$

The boundary conditions for the simply supported beam are $y = 0$ at $x = 0$ and l . Applying the first condition, $y = 0$ at $x = 0$, to Eq. (2) results in $C_2 = 0$. Applying the second condition to Eq. (2) with $C_2 = 0$,

$$EIy(l) = \frac{wl}{12}l^3 - \frac{w}{24}l^4 + C_1l = 0$$

Solving for C_1 yields $C_1 = -wl^3/24$. Substituting the constants back into Eqs. (1) and (2) and solving for the deflection and slope results in

$$y = \frac{wx}{24EI}(2lx^2 - x^3 - l^3) \quad (3)$$

$$\theta = \frac{dy}{dx} = \frac{w}{24EI}(6lx^2 - 4x^3 - l^3) \quad (4)$$

Comparing Eq. (3) with that given in Table A–9, beam 7, we see complete agreement. For the slope at the left end, substituting $x = 0$ into Eq. (4) yields

$$\theta|_{x=0} = -\frac{wl^3}{24EI}$$

and at $x = l$,

$$\theta|_{x=l} = \frac{wl^3}{24EI}$$

At the midspan, substituting $x = l/2$ gives $dy/dx = 0$, as earlier suspected.

The maximum deflection occurs where $dy/dx = 0$. Substituting $x = l/2$ into Eq. (3) yields

$$y_{\max} = -\frac{5wl^4}{384EI}$$

which again agrees with Table A–9–7.

The approach used in the example is fine for simple beams with continuous loading. However, for beams with discontinuous loading and/or geometry such as a step shaft with multiple gears, flywheels, pulleys, etc., the approach becomes unwieldy. The following section discusses bending deflections in general and the techniques that are provided in this chapter.

4–4 Beam Deflection Methods

Equations (4–10) through (4–14) are the basis for relating the intensity of loading q , vertical shear V , bending moment M , slope of the neutral surface θ , and the transverse deflection y . Beams have intensities of loading that range from $q = \text{constant}$

(uniform loading), variable intensity $q(x)$, to Dirac delta functions (concentrated loads).

The intensity of loading usually consists of piecewise contiguous zones, the expressions for which are integrated through Eqs. (4–10) to (4–14) with varying degrees of difficulty. Another approach is to represent the deflection $y(x)$ as a Fourier series, which is capable of representing single-valued functions with a finite number of finite discontinuities, then differentiating through Eqs. (4–14) to (4–10), and stopping at some level where the Fourier coefficients can be evaluated. A complication is the piecewise continuous nature of some beams (shafts) that are stepped-diameter bodies.

All of the above constitute, in one form or another, formal integration methods, which, with properly selected problems, result in solutions for q , V , M , θ , and y . These solutions may be

- 1 Closed-form, or
- 2 Represented by infinite series, which amount to closed form if the series are rapidly convergent, or
- 3 Approximations obtained by evaluating the first or the first and second terms.

The series solutions can be made equivalent to the closed-form solution by the use of a computer. Roark's¹ formulas are committed to commercial software and can be used on a personal computer.

There are many techniques employed to solve the integration problem for beam deflection. Some of the popular methods include:

- Superposition (see Sec. 4–5)
- The moment-area method²
- Singularity functions (see Sec. 4–6)
- Numerical integration³

The two methods described in this chapter are easy to implement and can handle a large array of problems.

There are methods that do not deal with Eqs. (4–10) to (4–14) directly. An energy method, based on Castigliano's theorem, is quite powerful for problems not suitable for the methods mentioned earlier and is discussed in Secs. 4–7 to 4–10. Finite element programs are also quite useful for determining beam deflections.

4–5 Beam Deflections by Superposition

The results of many simple load cases and boundary conditions have been solved and are available. Table A–9 provides a limited number of cases. Roark's⁴ provides a much more comprehensive listing. *Superposition* resolves the effect of combined loading on a structure by determining the effects of each load separately and adding

¹Warren C. Young and Richard G. Budynas, *Roark's Formulas for Stress and Strain*, 7th ed., McGraw-Hill, New York, 2002.

²See Chap. 9, F. P. Beer, E. R. Johnston Jr., and J. T. DeWolf, *Mechanics of Materials*, 4th ed., McGraw-Hill, New York, 2006.

³See Sec. 4–4, J. E. Shigley and C. R. Mischke, *Mechanical Engineering Design*, 6th ed., McGraw-Hill, New York, 2001.

⁴Warren C. Young and Richard G. Budynas, *Roark's Formulas for Stress and Strain*, 7th ed., McGraw-Hill, New York, 2002.

the results algebraically. Superposition may be applied provided: (1) each effect is linearly related to the load that produces it, (2) a load does not create a condition that affects the result of another load, and (3) the deformations resulting from any specific load are not large enough to appreciably alter the geometric relations of the parts of the structural system.

The following examples are illustrations of the use of superposition.

EXAMPLE 4-2

Consider the uniformly loaded beam with a concentrated force as shown in Fig. 4-3. Using superposition, determine the reactions and the deflection as a function of x .

Solution

Considering each load state separately, we can superpose beams 6 and 7 of Table A-9. For the reactions we find

Answer

$$R_1 = \frac{Fb}{l} + \frac{wl}{2}$$

Answer

$$R_2 = \frac{Fa}{l} + \frac{wl}{2}$$

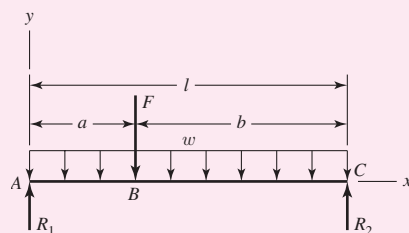
The loading of beam 6 is discontinuous and separate deflection equations are given for regions AB and BC . Beam 7 loading is not discontinuous so there is only one equation. Superposition yields

Answer

$$y_{AB} = \frac{Fbx}{6EI}(x^2 + b^2 - l^2) + \frac{wx}{24EI}(2lx^2 - x^3 - l^3)$$

Answer

$$y_{BC} = \frac{Fa(l-x)}{6EI}(x^2 + a^2 - 2lx) + \frac{wx}{24EI}(2lx^2 - x^3 - l^3)$$

Figure 4-3

If we wanted to determine the maximum deflection in the previous example, we would set $dy/dx = 0$ and solve for the value of x where the deflection is a maximum. If $a = l/2$, the maximum deflection would obviously occur at $x = l/2$ because of symmetry. However, if $a < l/2$, where would the maximum deflection be? It can be shown that as the force F moves toward the left support, the maximum deflection moves toward the left support also, but not as much as F (see Prob. 4-34). Thus, we would set $dy_{BC}/dx = 0$ and solve for x .

Sometimes it may not be obvious that we can use superposition with the tables at hand, as demonstrated in the next example.

EXAMPLE 4-3 Consider the beam in Fig. 4-4a and determine the deflection equations using superposition.

Solution For region AB we can superpose beams 7 and 10 of Table A-9 to obtain

Answer

$$y_{AB} = \frac{wx}{24EI}(2lx^2 - x^3 - l^3) + \frac{Fax}{6EI}(l^2 - x^2)$$

For region BC , how do we represent the uniform load? Considering the uniform load *only*, the beam deflects as shown in Fig. 4-4b. Region BC is straight since there is no bending moment due to w . The slope of the beam at B is θ_B and is obtained by taking the derivative of y given in the table with respect to x and setting $x = l$. Thus,

$$\frac{dy}{dx} = \frac{d}{dx} \left[\frac{wx}{24EI}(2lx^2 - x^3 - l^3) \right] = \frac{w}{24EI}(6lx^2 - 4x^3 - l^3)$$

Substituting $x = l$ gives

$$\theta_B = \frac{w}{24EI}(6l^2 - 4l^3 - l^3) = \frac{wl^3}{24EI}$$

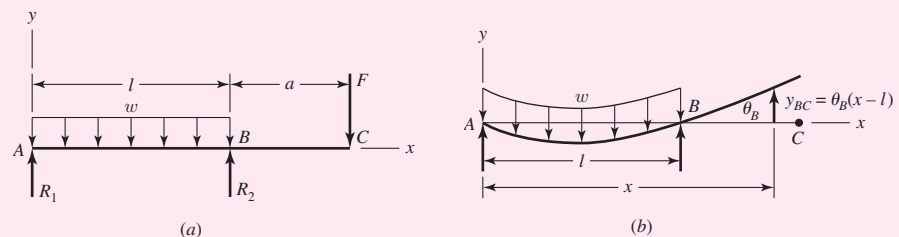
The deflection in region BC due to w is $\theta_B(x - l)$, and adding this to the deflection due to F , in BC , yields

Answer

$$y_{BC} = \frac{wl^3}{24EI}(x - l) + \frac{F(x - l)}{6EI}[(x - l)^2 - a(3x - l)]$$

Figure 4-4

(a) Beam with uniformly distributed load and overhang force; (b) deflections due to uniform load only.



EXAMPLE 4-4 Figure 4-5a shows a cantilever beam with an end load. Normally we model this problem by considering the left support as rigid. After testing the rigidity of the wall it was found that the translational stiffness of the wall was k_t force per unit vertical deflection, and the rotational stiffness was k_r moment per unit angular (radian) deflection (see Fig. 4-5b). Determine the deflection equation for the beam under the load F .

Solution Here we will superpose the *modes* of deflection. They are: (1) translation due to the compression of spring k_t , (2) rotation of the spring k_r , and (3) the elastic deformation of the beam given by Table A–9–1. The force in spring k_t is $R_1 = F$, giving a deflection from Eq. (4–2) of

$$y_1 = -\frac{F}{k_t} \quad (1)$$

The moment in spring k_r is $M_1 = Fl$. This gives a clockwise rotation of $\theta = Fl/k_r$. Considering this mode of deflection only, the beam rotates rigidly clockwise, leading to a deflection equation of

$$y_2 = -\frac{Fl}{k_r}x \quad (2)$$

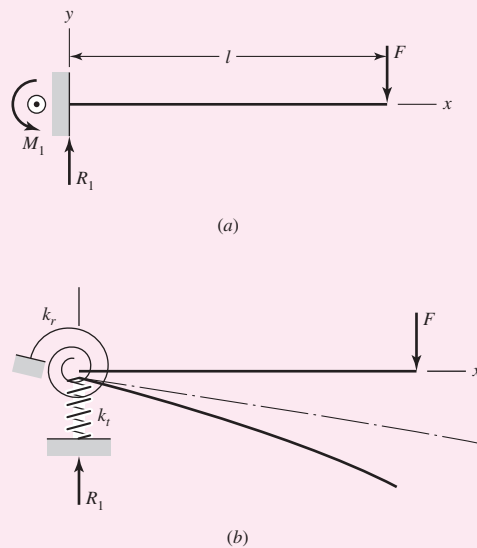
Finally, the elastic deformation of the beam from Table A–9–1 is

$$y_3 = \frac{Fx^2}{6EI}(x - 3l) \quad (3)$$

Adding the deflections from each mode yields

Answer
$$y = \frac{Fx^2}{6EI}(x - 3l) - \frac{F}{k_t} - \frac{Fl}{k_r}x$$

Figure 4–5



4–6 Beam Deflections by Singularity Functions

Introduced in Sec. 3–3, singularity functions are excellent for managing discontinuities, and their application to beam deflection is a simple extension of what was presented in the earlier section. They are easy to program, and as will be seen later, they can greatly simplify the solution of statically indeterminate problems. The following examples illustrate the use of singularity functions to evaluate deflections of statically determinate beam problems.

EXAMPLE 4–5

Consider the beam of Table A–9–6, which is a simply supported beam having a concentrated load F not in the center. Develop the deflection equations using singularity functions.

Solution

First, write the load intensity equation from the free-body diagram,

$$q = R_1 \langle x \rangle^{-1} - F \langle x - a \rangle^{-1} + R_2 \langle x - l \rangle^{-1} \quad (1)$$

Integrating Eq. (1) twice results in

$$V = R_1 \langle x \rangle^0 - F \langle x - a \rangle^0 + R_2 \langle x - l \rangle^0 \quad (2)$$

$$M = R_1 \langle x \rangle^1 - F \langle x - a \rangle^1 + R_2 \langle x - l \rangle^1 \quad (3)$$

Recall that as long as the q equation is complete, integration constants are unnecessary for V and M ; therefore, they are not included up to this point. From statics, setting $V = M = 0$ for x slightly greater than l yields $R_1 = Fb/l$ and $R_2 = Fa/l$. Thus Eq. (3) becomes

$$M = \frac{Fb}{l} \langle x \rangle^1 - F \langle x - a \rangle^1 + \frac{Fa}{l} \langle x - l \rangle^1$$

Integrating Eqs. (4–12) and (4–13) as indefinite integrals gives

$$EI \frac{dy}{dx} = \frac{Fb}{2l} \langle x \rangle^2 - \frac{F}{2} \langle x - a \rangle^2 + \frac{Fa}{2l} \langle x - l \rangle^2 + C_1$$

$$EI y = \frac{Fb}{6l} \langle x \rangle^3 - \frac{F}{6} \langle x - a \rangle^3 + \frac{Fa}{6l} \langle x - l \rangle^3 + C_1 x + C_2$$

Note that the first singularity term in both equations always exists, so $\langle x \rangle^2 = x^2$ and $\langle x \rangle^3 = x^3$. Also, the last singularity term in both equations does not exist until $x = l$, where it is zero, and since there is no beam for $x > l$ we can drop the last term. Thus

$$EI \frac{dy}{dx} = \frac{Fb}{2l} x^2 - \frac{F}{2} \langle x - a \rangle^2 + C_1 \quad (4)$$

$$EI y = \frac{Fb}{6l} x^3 - \frac{F}{6} \langle x - a \rangle^3 + C_1 x + C_2 \quad (5)$$

The constants of integration C_1 and C_2 are evaluated by using the two boundary conditions $y = 0$ at $x = 0$ and $y = 0$ at $x = l$. The first condition, substituted into Eq. (5), gives $C_2 = 0$ (recall that $\langle 0 - a \rangle^3 = 0$). The second condition, substituted into Eq. (5), yields

$$0 = \frac{Fb}{6l} l^3 - \frac{F}{6} (l - a)^3 + C_1 l = \frac{Fbl^2}{6} - \frac{Fb^3}{6} + C_1 l$$

Solving for C_1 ,

$$C_1 = -\frac{Fb}{6l} (l^2 - b^2)$$

Finally, substituting C_1 and C_2 in Eq. (5) and simplifying produces

$$y = \frac{F}{6EI} [bx(x^2 + b^2 - l^2) - l\langle x - a \rangle^3] \quad (6)$$

Comparing Eq. (6) with the two deflection equations in Table A–9–6, we note that the use of singularity functions enables us to express the deflection equation with a single equation.

EXAMPLE 4–6

Determine the deflection equation for the simply supported beam with the load distribution shown in Fig. 4–6.

Solution

This is a good beam to add to our table for later use with superposition. The load intensity equation for the beam is

$$q = R_1 \langle x \rangle^{-1} - w \langle x \rangle^0 + w \langle x - a \rangle^0 + R_2 \langle x - l \rangle^{-1} \quad (1)$$

where the $w \langle x - a \rangle^0$ is necessary to “turn off” the uniform load at $x = a$.

From statics, the reactions are

$$R_1 = \frac{wa}{2l}(2l - a) \quad R_2 = \frac{wa^2}{2l} \quad (2)$$

For simplicity, we will retain the form of Eq. (1) for integration and substitute the values of the reactions in later.

Two integrations of Eq. (1) reveal

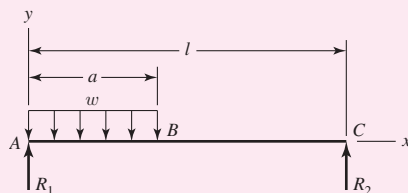
$$V = R_1 \langle x \rangle^0 - w \langle x \rangle^1 + w \langle x - a \rangle^1 + R_2 \langle x - l \rangle^0 \quad (3)$$

$$M = R_1 \langle x \rangle^1 - \frac{w}{2} \langle x \rangle^2 + \frac{w}{2} \langle x - a \rangle^2 + R_2 \langle x - l \rangle^1 \quad (4)$$

As in the previous example, singularity functions of order zero or greater starting at $x = 0$ can be replaced by normal polynomial functions. Also, once the reactions are determined, singularity functions starting at the extreme right end of the beam can be omitted. Thus, Eq. (4) can be rewritten as

$$M = R_1 x - \frac{w}{2} x^2 + \frac{w}{2} \langle x - a \rangle^2 \quad (5)$$

| Figure 4–6



Integrating two more times for slope and deflection gives

$$EI \frac{dy}{dx} = \frac{R_1}{2}x^2 - \frac{w}{6}x^3 + \frac{w}{6}\langle x - a \rangle^3 + C_1 \quad (6)$$

$$EIy = \frac{R_1}{6}x^3 - \frac{w}{24}x^4 + \frac{w}{24}\langle x - a \rangle^4 + C_1x + C_2 \quad (7)$$

The boundary conditions are $y = 0$ at $x = 0$ and $y = 0$ at $x = l$. Substituting the first condition in Eq. (7) shows $C_2 = 0$. For the second condition

$$0 = \frac{R_1}{6}l^3 - \frac{w}{24}l^4 + \frac{w}{24}(l - a)^4 + C_1l$$

Solving for C_1 and substituting into Eq. (7) yields

$$EIy = \frac{R_1}{6}x(x^2 - l^2) - \frac{w}{24}x(x^3 - l^3) - \frac{w}{24l}x(l - a)^4 + \frac{w}{24}\langle x - a \rangle^4$$

Finally, substitution of R_1 from Eq. (2) and simplifying results gives

Answer
$$y = \frac{w}{24EI} [2ax(2l - a)(x^2 - l^2) - xl(x^3 - l^3) - x(l - a)^4 + l\langle x - a \rangle^4]$$

As stated earlier, singularity functions are relatively simple to program, as they are omitted when their arguments are negative, and the $\langle \rangle$ brackets are replaced with $()$ parentheses when the arguments are positive.

EXAMPLE 4-7

The steel step shaft shown in Fig. 4-7a is mounted in bearings at A and F . A pulley is centered at C where a total radial force of 600 lbf is applied. Using singularity functions evaluate the shaft displacements at $\frac{1}{2}$ -in increments. Assume the shaft is simply supported.

Solution

The reactions are found to be $R_1 = 360$ lbf and $R_2 = 240$ lbf. Ignoring R_2 , using singularity functions, the moment equation is

$$M = 360x - 600\langle x - 8 \rangle^1 \quad (1)$$

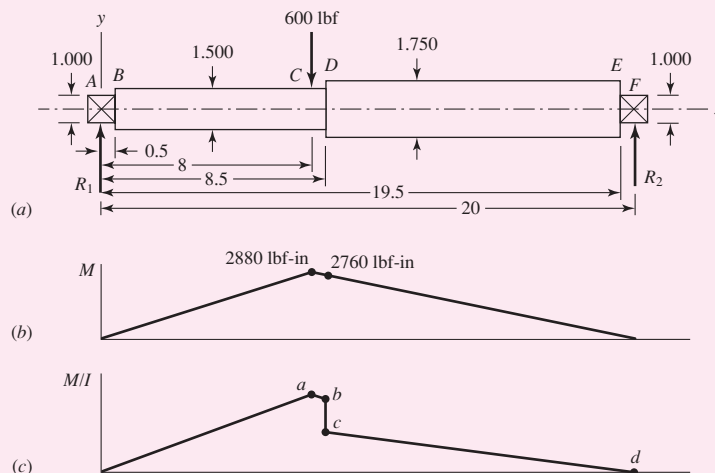
This is plotted in Fig. 4-7b.

For simplification, we will consider only the step at D . That is, we will assume section AB has the same diameter as BC and section EF has the same diameter as DE . Since these sections are short and at the supports, the size reduction will not add much to the deformation. We will examine this simplification later. The second area moments for BC and DE are

$$I_{BC} = \frac{\pi}{64}1.5^4 = 0.2485 \text{ in}^4 \quad I_{DE} = \frac{\pi}{64}1.75^4 = 0.4604 \text{ in}^4$$

Figure 4-7

Dimensions in inches.



A plot of M/I is shown in Fig. 4-7c. The values at points b and c , and the step change are

$$\left(\frac{M}{I}\right)_b = \frac{2760}{0.2485} = 11\,106.6 \text{ lbf/in}^3 \quad \left(\frac{M}{I}\right)_c = \frac{2760}{0.4604} = 5\,994.8 \text{ lbf/in}^3$$

$$\Delta\left(\frac{M}{I}\right) = 5\,994.8 - 11\,106.6 = -5\,111.8 \text{ lbf/in}^3$$

The slopes for ab and cd , and the change are

$$m_{ab} = \frac{360 - 600}{0.2485} = -965.8 \text{ lbf/in}^4 \quad m_{cd} = \frac{-5\,994.8}{11.5} = -521.3 \text{ lbf/in}^4$$

$$\Delta m = -521.3 - (-965.8) = 444.5 \text{ lbf/in}^4$$

Dividing Eq. (1) by I_{BC} and, at $x = 8.5$ in, adding a step of $-5\,111.8 \text{ lbf/in}^3$ and a ramp of slope 444.5 lbf/in^4 , gives

$$\frac{M}{I} = 1\,448.7x - 2\,414.5(x-8)^1 - 5\,111.8(x-8.5)^0 + 444.5(x-8.5)^1 \quad (2)$$

Integrating twice gives

$$E \frac{dy}{dx} = 724.35x^2 - 1207.3(x-8)^2 - 5\,111.8(x-8.5)^1 + 222.3(x-8.5)^2 + C_1 \quad (3)$$

and

$$Ey = 241.5x^3 - 402.4(x-8)^3 - 2\,555.9(x-8.5)^2 + 74.08(x-8.5)^3 + C_1x + C_2 \quad (4)$$

At $x = 0$, $y = 0$. This gives $C_2 = 0$ (remember, singularity functions do not exist until the argument is positive). At $x = 20$ in, $y = 0$, and

$$0 = 241.5(20)^3 - 402.4(20-8)^3 - 2\,555.9(20-8.5)^2 + 74.08(20-8.5)^3 + C_1(20)$$

Solving, gives $C_1 = -50\,565 \text{ lbf/in}^2$. Thus, Eq. (4) becomes, with $E = 30(10)^6 \text{ psi}$,

$$y = \frac{1}{30(10^6)}(241.5x^3 - 402.4(x - 8)^3 - 2\,555.9(x - 8.5)^2 + 74.08(x - 8.5)^3 - 50\,565x) \quad (5)$$

When using a spreadsheet, program the following equations:

$$y = \frac{1}{30(10^6)}(241.5x^3 - 50\,565x) \quad 0 \leq x \leq 8 \text{ in}$$

$$y = \frac{1}{30(10^6)}[241.5x^3 - 402.4(x - 8)^3 - 50\,565x] \quad 8 \leq x \leq 8.5 \text{ in}$$

$$y = \frac{1}{30(10^6)}[241.5x^3 - 402.4(x - 8)^3 - 2\,555.9(x - 8.5)^2 + 74.08(x - 8.5)^3 - 50\,565x] \quad 8.5 \leq x \leq 20 \text{ in}$$

The following table results.

x	y	x	y	x	y	x	y	x	y
0	0.000000	4.5	-0.006851	9	-0.009335	13.5	-0.007001	18	-0.002377
0.5	-0.000842	5	-0.007421	9.5	-0.009238	14	-0.006571	18.5	-0.001790
1	-0.001677	5.5	-0.007931	10	-0.009096	14.5	-0.006116	19	-0.001197
1.5	-0.002501	6	-0.008374	10.5	-0.008909	15	-0.005636	19.5	-0.000600
2	-0.003307	6.5	-0.008745	11	-0.008682	15.5	-0.005134	20	0.000000
2.5	-0.004088	7	-0.009037	11.5	-0.008415	16	-0.004613		
3	-0.004839	7.5	-0.009245	12	-0.008112	16.5	-0.004075		
3.5	-0.005554	8	-0.009362	12.5	-0.007773	17	-0.003521		
4	-0.006227	8.5	-0.009385	13	-0.007403	17.5	-0.002954		

where x and y are in inches. We see that the greatest deflection is at $x = 8.5 \text{ in}$, where $y = -0.009385 \text{ in}$.

Substituting C_1 into Eq. (3) the slopes at the supports are found to be $\theta_A = 1.686(10^{-3}) \text{ rad} = 0.09657 \text{ deg}$, and $\theta_F = 1.198(10^{-3}) \text{ rad} = 0.06864 \text{ deg}$. You might think these to be insignificant deflections, but as you will see in Chap. 7, on shafts, they are not.

A finite-element analysis was performed for the same model and resulted in

$$y|_{x=8.5 \text{ in}} = -0.009380 \text{ in} \quad \theta_A = -0.09653^\circ \quad \theta_F = 0.06868^\circ$$

Virtually the same answer save some round-off error in the equations.

If the steps of the bearings were incorporated into the model, more equations result, but the process is the same. The solution to this model is

$$y|_{x=8.5 \text{ in}} = -0.009387 \text{ in} \quad \theta_A = -0.09763^\circ \quad \theta_F = 0.06973^\circ$$

The largest difference between the models is of the order of 1.5 percent. Thus the simplification was justified.

In Sec. 4–9, we will demonstrate the usefulness of singularity functions in solving statically indeterminate problems.

4–7 Strain Energy

The external work done on an elastic member in deforming it is transformed into *strain*, or *potential*, *energy*. If the member is deformed a distance y , and if the force-deflection relationship is linear, this energy is equal to the product of the average force and the deflection, or

$$U = \frac{F}{2}y = \frac{F^2}{2k} \quad (a)$$

This equation is general in the sense that the force F can also mean torque, or moment, provided, of course, that consistent units are used for k . By substituting appropriate expressions for k , strain-energy formulas for various simple loadings may be obtained. For tension and compression and for torsion, for example, we employ Eqs. (4–4) and (4–7) and obtain

$$U = \frac{F^2l}{2AE} \quad \text{tension and compression} \quad (4-15)$$

$$U = \frac{T^2l}{2GJ} \quad \text{torsion} \quad (4-16)$$

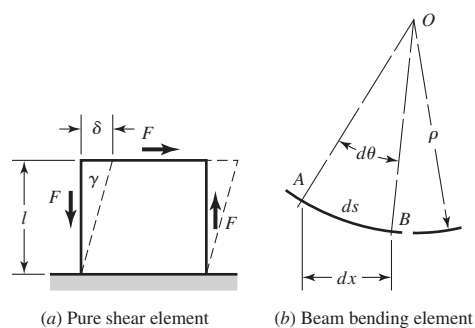
To obtain an expression for the strain energy due to direct shear, consider the element with one side fixed in Fig. 4–8a. The force F places the element in pure shear, and the work done is $U = F\delta/2$. Since the shear strain is $\gamma = \delta/l = \tau/G = F/AG$, we have

$$U = \frac{F^2l}{2AG} \quad \text{direct shear} \quad (4-17)$$

The strain energy stored in a beam or lever by bending may be obtained by referring to Fig. 4–8b. Here AB is a section of the elastic curve of length ds having a radius of curvature ρ . The strain energy stored in this element of the beam is $dU = (M/2)d\theta$. Since $\rho d\theta = ds$, we have

$$dU = \frac{M ds}{2\rho} \quad (b)$$

| Figure 4–8



We can eliminate ρ by using Eq. (4–8). Thus

$$dU = \frac{M^2 ds}{2EI} \quad (c)$$

For small deflections, $ds \doteq dx$. Then, for the entire beam

$$U = \int \frac{M^2 dx}{2EI} \quad \text{bending} \quad (4-18)$$

Equation (4–18) is exact only when a beam is subject to pure bending. Even when shear is present, Eq. (4–18) continues to give quite good results, except for very short beams. The strain energy due to shear loading of a beam is a complicated problem. An approximate solution can be obtained by using Eq. (4–17) with a correction factor whose value depends upon the shape of the cross section. If we use C for the correction factor and V for the shear force, then the strain energy due to shear in bending is the integral of Eq. (4–17), or

$$U = \int \frac{CV^2 dx}{2AG} \quad \text{bending shear} \quad (4-19)$$

Values of the factor C are listed in Table 4–1.

Table 4–1

Strain-Energy Correction
Factors for Shear

Source: Richard G. Budynas,
*Advanced Strength and
Applied Stress Analysis*,
2nd ed., McGraw-Hill,
New York, 1999.
Copyright © 1999 The
McGraw-Hill Companies.

Beam Cross-Sectional Shape	Factor C
Rectangular	1.2
Circular	1.11
Thin-walled tubular, round	2.00
Box sections [†]	1.00
Structural sections [†]	1.00

[†]Use area of web only.

EXAMPLE 4–8

Find the strain energy due to shear in a rectangular cross-section beam, simply supported, and having a uniformly distributed load.

Solution

Using Appendix Table A–9–7, we find the shear force to be

$$V = \frac{wl}{2} - wx$$

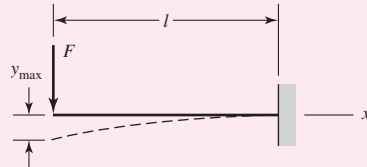
Substituting into Eq. (4–19), with $C = 1.2$, gives

Answer

$$U = \frac{1.2}{2AG} \int_0^l \left(\frac{wl}{2} - wx \right)^2 dx = \frac{w^2 l^3}{20AG}$$

EXAMPLE 4-9

A cantilever has a concentrated load F at the end, as shown in Fig. 4-9. Find the strain energy in the beam by neglecting shear.

Figure 4-9

Solution At any point x along the beam, the moment is $M = -Fx$. Substituting this value of M into Eq. (4-18), we find

Answer

$$U = \int_0^l \frac{F^2 x^2}{2EI} dx = \frac{F^2 l^3}{6EI}$$

4-8 Castigliano's Theorem

A most unusual, powerful, and often surprisingly simple approach to deflection analysis is afforded by an energy method called *Castigliano's theorem*. It is a unique way of analyzing deflections and is even useful for finding the reactions of indeterminate structures. Castigliano's theorem states that *when forces act on elastic systems subject to small displacements, the displacement corresponding to any force, in the direction of the force, is equal to the partial derivative of the total strain energy with respect to that force*. The terms *force* and *displacement* in this statement are broadly interpreted to apply equally to moments and angular displacements. Mathematically, the theorem of Castigliano is

$$\delta_i = \frac{\partial U}{\partial F_i} \quad (4-20)$$

where δ_i is the displacement of the point of application of the force F_i in the direction of F_i . For rotational displacement Eq. (4-20) can be written as

$$\theta_i = \frac{\partial U}{\partial M_i} \quad (4-21)$$

where θ_i is the rotational displacement, in radians, of the beam where the moment M_i exists and in the direction of M_i .

As an example, apply Castigliano's theorem using Eqs. (4-15) and (4-16) to get the axial and torsional deflections. The results are

$$\delta = \frac{\partial}{\partial F} \left(\frac{F^2 l}{2AE} \right) = \frac{Fl}{AE} \quad (a)$$

$$\theta = \frac{\partial}{\partial T} \left(\frac{T^2 l}{2GJ} \right) = \frac{Tl}{GJ} \quad (b)$$

Compare Eqs. (a) and (b) with Eqs. (4–3) and (4–5). In Example 4–8, the bending strain energy for a cantilever having a concentrated end load was found. According to Castigliano's theorem, the deflection at the end of the beam due to bending is

$$y = \frac{\partial U}{\partial F} = \frac{\partial}{\partial F} \left(\frac{F^2 l^3}{6EI} \right) = \frac{Fl^3}{3EI} \quad (c)$$

which checks with Table A–9–1.

Castigliano's theorem can be used to find the deflection at a point even though no force or moment acts there. The procedure is:

- 1 Set up the equation for the total strain energy U by including the energy due to a fictitious force or moment Q_i acting at the point whose deflection is to be found.
- 2 Find an expression for the desired deflection δ_i , in the direction of Q_i , by taking the derivative of the total strain energy with respect to Q_i .
- 3 Since Q_i is a fictitious force, solve the expression obtained in step 2 by setting Q_i equal to zero. Thus,

$$\delta_i = \left. \frac{\partial U}{\partial Q_i} \right|_{Q_i=0} \quad (4-22)$$

EXAMPLE 4–10

The cantilever of Ex. 4–9 is a carbon steel bar 10 in long with a 1-in diameter and is loaded by a force $F = 100$ lbf.

- (a) Find the maximum deflection using Castigliano's theorem, including that due to shear.
- (b) What error is introduced if shear is neglected?

Solution

(a) From Eq. (4–19) and Example 4–9 data, the total strain energy is

$$U = \frac{F^2 l^3}{6EI} + \int_0^l \frac{CV^2 dx}{2AG} \quad (1)$$

For the cantilever, the shear force is constant with respect to x , $V = F$. Also, $C = 1.11$, from Table 4–1. Performing the integration and substituting these values in Eq. (1) gives, for the total strain energy,

$$U = \frac{F^2 l^3}{6EI} + \frac{1.11 F^2 l}{2AG} \quad (2)$$

Then, according to Castigliano's theorem, the deflection of the end is

$$y = \frac{\partial U}{\partial F} = \frac{Fl^3}{3EI} + \frac{1.11 Fl}{AG} \quad (3)$$

We also find that

$$I = \frac{\pi d^4}{64} = \frac{\pi(1)^4}{64} = 0.0491 \text{ in}^4$$

$$A = \frac{\pi d^2}{4} = \frac{\pi(1)^2}{4} = 0.7854 \text{ in}^2$$

Substituting these values, together with $F = 100$ lbf, $l = 10$ in, $E = 30$ Mpsi, and $G = 11.5$ Mpsi, in Eq. (3) gives

Answer
$$y = 0.022\ 63 + 0.000\ 12 = 0.022\ 75$$
 in

Note that the result is positive because it is in the *same* direction as the force F .
Answer (b) The error in neglecting shear for this problem is found to be about 0.53 percent.

In performing any integrations, it is generally better to take the partial derivative with respect to the load F_i first. This is true especially if the force is a fictitious force Q_i , since it can be set to zero as soon as the derivative is taken. This is demonstrated in the next example. The forms for deflection can then be rewritten. Here we will assume, for axial and torsional loading, that material and cross section properties and loading can vary along the length of the members. From Eqs. (4–15), (4–16), and (4–18),

$$\delta_i = \frac{\partial U}{\partial F_i} = \int \frac{1}{AE} \left(F \frac{\partial F}{\partial F_i} \right) dx \quad \text{tension and compression} \quad (4-23)$$

$$\theta_i = \frac{\partial U}{\partial M_i} = \int \frac{1}{GJ} \left(T \frac{\partial T}{\partial M_i} \right) dx \quad \text{torsion} \quad (4-24)$$

$$\delta_i = \frac{\partial U}{\partial F_i} = \int \frac{1}{EI} \left(M \frac{\partial M}{\partial F_i} \right) dx \quad \text{bending} \quad (4-25)$$

EXAMPLE 4–11

Using Castigliano's method, determine the deflections of points A and B due to the force F applied at the end of the step shaft shown in Fig. 4–10. The second area moments for sections AB and BC are I_1 and $2I_1$, respectively.

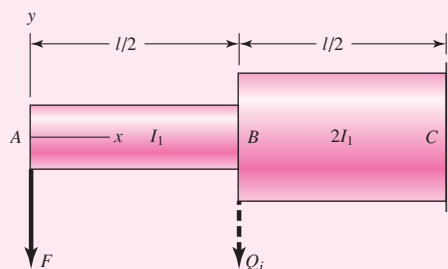
Solution

With cantilever beams we normally set up the coordinate system such that x starts at the wall and is directed towards the free end. Here, for simplicity, we have reversed that. With the coordinate system of Fig. 4–10 the bending moment expression is simpler than with the usual coordinate system, and does not require the support reactions. For $0 \leq x \leq l$, the bending moment is

$$M = -Fx \quad (1)$$

Since F is at A and in the direction of the desired deflection, the deflection at A from Eq. (4–25) is

Figure 4–10



$$\delta_A = \frac{\partial U}{\partial F} = \int_0^l \frac{1}{EI} \left(M \frac{\partial M}{\partial F} \right) dx \quad (2)$$

Substituting Eq. (1) into Eq. (2), noting that $I = I_1$ for $0 \leq x \leq l/2$, and $I = 2I_1$ for $l/2 \leq x \leq l$, we get

Answer

$$\begin{aligned} \delta_A &= \frac{1}{E} \left[\int_0^{l/2} \frac{1}{I_1} (-Fx)(-x) dx + \int_{l/2}^l \frac{1}{2I_1} (-Fx)(-x) dx \right] \\ &= \frac{1}{E} \left[\frac{Fl^3}{24I_1} + \frac{7Fl^3}{48I_1} \right] = \frac{3}{16} \frac{Fl^3}{EI_1} \end{aligned}$$

which is positive, as it is in the direction of F .

For B , a fictitious force Q_i is necessary at the point. Assuming Q_i acts down at B , and x is as before, the moment equation is

$$\begin{aligned} M &= -Fx & 0 \leq x \leq l/2 \\ M &= -Fx - Q_i \left(x - \frac{l}{2} \right) & l/2 \leq x \leq l \end{aligned} \quad (3)$$

For Eq. (4–25), we need $\partial M / \partial Q_i$. From Eq. (3),

$$\begin{aligned} \frac{\partial M}{\partial Q_i} &= 0 & 0 \leq x \leq l/2 \\ \frac{\partial M}{\partial Q_i} &= - \left(x - \frac{l}{2} \right) & l/2 \leq x \leq l \end{aligned} \quad (4)$$

Once the derivative is taken, Q_i can be set to zero, so from Eq. (3), $M = -Fx$ for $0 \leq x \leq l$, and Eq. (4–25) becomes

$$\begin{aligned} \delta_B &= \left[\int_0^l \frac{1}{EI} \left(M \frac{\partial M}{\partial Q_i} \right) dx \right]_{Q_i=0} \\ &= \frac{1}{EI_1} \int_0^{l/2} (-Fx)(0) dx + \frac{1}{E(2I_1)} \int_{l/2}^l (-Fx) \left[- \left(x - \frac{l}{2} \right) \right] dx \end{aligned}$$

Evaluating the last integral gives

Answer

$$\delta_B = \frac{F}{2EI_1} \left(\frac{x^3}{3} - \frac{lx^2}{4} \right) \Bigg|_{l/2}^l = \frac{5}{96} \frac{Fl^3}{EI_1}$$

which again is positive, in the direction of Q_i .

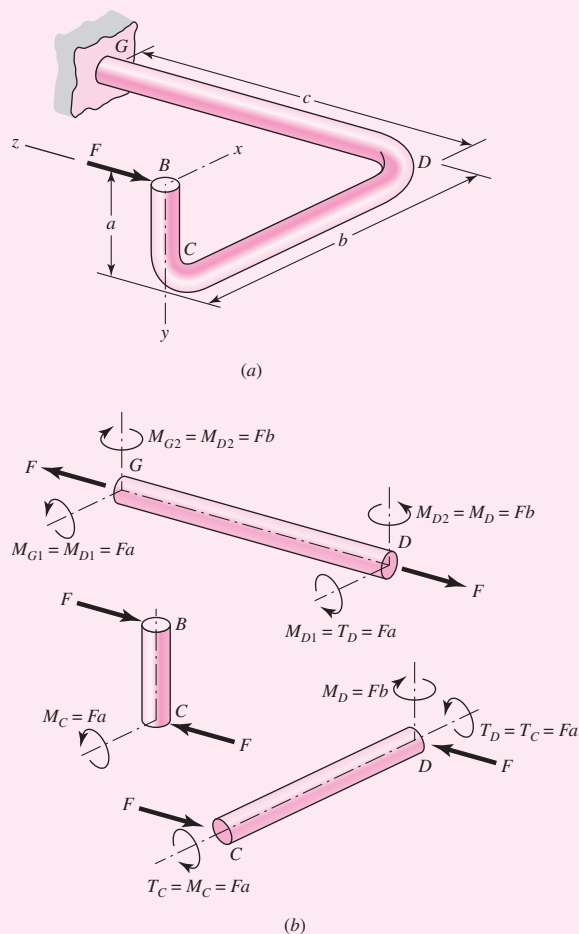
EXAMPLE 4–12

For the wire form of diameter d shown in Fig. 4–11a, determine the deflection of point B in the direction of the applied force F (neglect the effect of bending shear).

Solution

It is very important to include the loading effects on all parts of the structure. Coordinate systems are not important, but loads must be consistent with the problem. Thus

| Figure 4-11



appropriate use of *free-body diagrams* is essential here. The reader should verify that the reactions as functions of F in elements BC , CD , and GD are as shown in Fig. 4-11b.

The deflection of B in the direction of F is given by

$$\delta_B = \frac{\partial U}{\partial F}$$

so the partial derivatives in Eqs. (4-23) to (4-25) will all be taken with respect to F .

Element BC is in bending only so from Eq. (4-25),⁵

$$\frac{\partial U_{BC}}{\partial F} = \frac{1}{EI} \int_0^a (-Fy)(-y) dy = \frac{Fa^3}{3EI} \quad (1)$$

Element CD is in bending and in torsion. The torsion is constant so Eq. (4-24) can be written as

$$\frac{\partial U}{\partial F_i} = \left(T \frac{\partial T}{\partial F_i} \right) \frac{l}{GJ}$$

⁵It is very tempting to mix techniques and try to use superposition also, for example. However, some subtle things can occur that you may visually miss. It is highly recommended that if you are using Castigliano's theorem on a problem, you use it for all parts of the problem.

where l is the length of the member. So for the torsion in member CD , $F_i = F$, $T = Fa$, and $l = b$. Thus,

$$\left(\frac{\partial U_{CD}}{\partial F}\right)_{\text{torsion}} = (Fa)(a)\frac{b}{GJ} = \frac{Fa^2b}{GJ} \quad (2)$$

For the bending in CD ,

$$\left(\frac{\partial U_{CD}}{\partial F}\right)_{\text{bending}} = \frac{1}{EI} \int_0^b (-Fx)(-x) dx = \frac{Fb^3}{3EI} \quad (3)$$

Member DG is axially loaded and is bending in two planes. The axial loading is constant, so Eq. (4–23) can be written as

$$\frac{\partial U}{\partial F_i} = \left(F \frac{\partial F}{\partial F_i}\right) \frac{l}{AE}$$

where l is the length of the member. Thus, for the axial loading of DG , $F = F_i$, $l = c$, and

$$\left(\frac{\partial U_{DG}}{\partial F}\right)_{\text{axial}} = \frac{Fc}{AE} \quad (4)$$

The bending moments in each plane of DG are constant along the length of $M_y = Fb$ and $M_x = Fa$. Considering each one separately in the form of Eq. (4–25) gives

$$\begin{aligned} \left(\frac{\partial U_{DG}}{\partial F}\right)_{\text{bending}} &= \frac{1}{EI} \int_0^c (Fb)(b) dz + \frac{1}{EI} \int_0^c (Fa)(a) dz \\ &= \frac{Fc(a^2 + b^2)}{EI} \end{aligned} \quad (5)$$

Adding Eqs. (1) to (5), noting that $I = \pi d^4/64$, $J = 2I$, $A = \pi d^2/4$, and $G = E/[2(1 + \nu)]$, we find that the deflection of B in the direction of F is

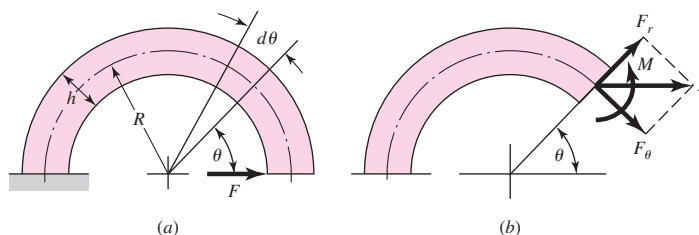
Answer
$$(\delta_B)_F = \frac{4F}{3\pi E d^4} [16(a^3 + b^3) + 48c(a^2 + b^2) + 48(1 + \nu)a^2b + 3cd^2]$$

Now that we have completed the solution, see if you can physically account for each term in the result.

4–9 Deflection of Curved Members

Machine frames, springs, clips, fasteners, and the like frequently occur as curved shapes. The determination of stresses in curved members has already been described in Sec. 3–18. Castigliano's theorem is particularly useful for the analysis of deflections in curved parts too. Consider, for example, the curved frame of Fig. 4–12a. We are interested in finding the deflection of the frame due to F and in the direction of F . The total strain energy consists of four terms, and we shall consider each separately. The first is due to the bending moment and is⁶

⁶ See Richard G. Budynas, *Advanced Strength and Applied Stress Analysis*, 2nd ed., Sec. 6.7, McGraw-Hill, New York, 1999.

**Figure 4-12**

(a) Curved bar loaded by force F . R = radius to centroidal axis of section; h = section thickness. (b) Diagram showing forces acting on section taken at angle θ . $F_r = V$ = shear component of F ; F_θ is component of F normal to section; M is moment caused by force F .

$$U_1 = \int \frac{M^2 d\theta}{2AeE} \quad (4-26)$$

In this equation, the eccentricity e is

$$e = R - r_n \quad (4-27)$$

where r_n is the radius of the neutral axis as defined in Sec. 3–18 and shown in Fig. 3–34.

An approximate result can be obtained by using the equation

$$U_1 \doteq \int \frac{M^2 R d\theta}{2EI} \quad \frac{R}{h} > 10 \quad (4-28)$$

which is obtained directly from Eq. (4–18). Note the limitation on the use of Eq. (4–28).

The strain energy component due to the normal force F_θ consists of two parts, one of which is axial and analogous to Eq. (4–15). This part is

$$U_2 = \int \frac{F_\theta^2 R d\theta}{2AE} \quad (4-29)$$

The force F_θ also produces a moment, which opposes the moment M in Fig. 4–12b. The resulting strain energy will be subtractive and is

$$U_3 = - \int \frac{MF_\theta d\theta}{AE} \quad (4-30)$$

The negative sign of Eq. (4–30) can be appreciated by referring to both parts of Fig. 4–12. Note that the moment M tends to decrease the angle $d\theta$. On the other hand, the moment due to F_θ tends to increase $d\theta$. Thus U_3 is negative. If F_θ had been acting in the opposite direction, then both M and F_θ would tend to decrease the angle $d\theta$.

The fourth and last term is the shear energy due to F_r . Adapting Eq. (4–19) gives

$$U_4 = \int \frac{CF_r^2 R d\theta}{2AG} \quad (4-31)$$

where C is the correction factor of Table 4–1.

Combining the four terms gives the total strain energy

$$U = \int \frac{M^2 d\theta}{2AeE} + \int \frac{F_\theta^2 R d\theta}{2AE} - \int \frac{MF_\theta d\theta}{AE} + \int \frac{CF_r^2 R d\theta}{2AG} \quad (4-32)$$

The deflection produced by the force F can now be found. It is

$$\begin{aligned} \delta = \frac{\partial U}{\partial F} = & \int_0^\pi \frac{M}{AeE} \left(\frac{\partial M}{\partial F} \right) d\theta + \int_0^\pi \frac{F_\theta R}{AE} \left(\frac{\partial F_\theta}{\partial F} \right) d\theta \\ & - \int_0^\pi \frac{1}{AE} \frac{\partial(MF_\theta)}{\partial F} d\theta + \int_0^\pi \frac{CF_r R}{AG} \left(\frac{\partial F_r}{\partial F} \right) d\theta \end{aligned} \quad (4-33)$$

Using Fig. 4–12*b*, we find

$$M = FR \sin \theta \quad \frac{\partial M}{\partial F} = R \sin \theta$$

$$F_\theta = F \sin \theta \quad \frac{\partial F_\theta}{\partial F} = \sin \theta$$

$$MF_\theta = F^2 R \sin^2 \theta \quad \frac{\partial MF_\theta}{\partial F} = 2FR \sin^2 \theta$$

$$F_r = F \cos \theta \quad \frac{\partial F_r}{\partial F} = \cos \theta$$

Substituting these into Eq. (4–33) and factoring yields

$$\begin{aligned} \delta = & \frac{FR^2}{AeE} \int_0^\pi \sin^2 \theta d\theta + \frac{FR}{AE} \int_0^\pi \sin^2 \theta d\theta - \frac{2FR}{AE} \int_0^\pi \sin^2 \theta d\theta \\ & + \frac{CFR}{AG} \int_0^\pi \cos^2 \theta d\theta \\ = & \frac{\pi FR^2}{2AeE} + \frac{\pi FR}{2AE} - \frac{\pi FR}{AE} + \frac{\pi CFR}{2AG} = \frac{\pi FR^2}{2AeE} - \frac{\pi FR}{2AE} + \frac{\pi CFR}{2AG} \end{aligned} \quad (4-34)$$

Because the first term contains the square of the radius, the second two terms will be small if the frame has a large radius. Also, if $R/h > 10$, Eq. (4–28) can be used. An approximate result then turns out to be

$$\delta \doteq \frac{\pi FR^3}{2EI} \quad (4-35)$$

The determination of the deflection of a curved member loaded by forces at right angles to the plane of the member is more difficult, but the method is the same.⁷ We shall include here only one of the more useful solutions to such a problem, though the methods for all are similar. Figure 4–13 shows a cantilevered ring segment having a span angle ϕ . Assuming $R/h > 10$, the strain energy neglecting direct shear, is obtained from the equation

$$U = \int_0^\phi \frac{M^2 R d\theta}{2EI} + \int_0^\phi \frac{T^2 R d\theta}{2GJ} \quad (4-36)$$

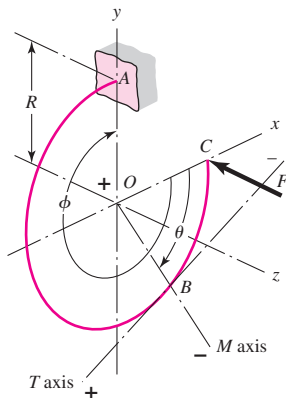


Figure 4–13

Ring ABC in the xy plane subject to force F parallel to the z axis. Corresponding to a ring segment CB at angle θ from the point of application of F , the moment axis is a line BO and the torque axis is a line in the xy plane tangent to the ring at B . Note the positive directions of the T and M axes.

⁷For more solutions than are included here, see Joseph E. Shigley, “Curved Beams and Rings,” Chap. 38 in Joseph E. Shigley, Charles R. Mischke, and Thomas H. Brown, Jr. (eds.), *Standard Handbook of Machine Design*, 3rd ed., McGraw-Hill, New York, 2004.

The moments and torques acting on a section at B , due to the force F , are

$$M = FR \sin \theta \quad T = FR(1 - \cos \theta)$$

The deflection δ of the ring segment at C and in the direction of F is then found to be

$$\delta = \frac{\partial U}{\partial F} = \frac{FR^3}{2} \left(\frac{\alpha}{EI} + \frac{\beta}{GJ} \right) \quad (4-37)$$

where the coefficients α and β are dependent on the span angle ϕ and are defined as follows:

$$\alpha = \phi - \sin \phi \cos \phi \quad (4-38)$$

$$\beta = 3\phi - 4 \sin \phi + \sin \phi \cos \phi \quad (4-38)$$

where ϕ is in radians.

EXAMPLE 4-13 Deflection in a Variable-Cross-Section Punch-Press Frame

The general result expressed in Eq. (4-34),

$$\delta = \frac{\pi FR^2}{2AeE} - \frac{\pi FR}{2AE} + \frac{\pi CFR}{2AG}$$

is useful in sections that are uniform and in which the centroidal locus is circular. The bending moment is largest where the material is farthest from the load axis. Strengthening requires a larger second area moment I . A variable-depth cross section is attractive, but it makes the integration to a closed form very difficult. However, if you are seeking results, numerical integration with computer assistance is helpful.

Consider the steel C frame depicted in Fig. 4-14a in which the centroidal radius is 32 in, the cross section at the ends is 2 in \times 2 in, and the depth varies sinusoidally with an amplitude of 2 in. The load is 1000 lbf. It follows that $C = 1.2$, $G = 11.5(10^6)$ psi, $E = 30(10^6)$ psi. The outer and inner radii are

$$R_{\text{out}} = 33 + 2\sin \theta \quad R_{\text{in}} = 31 - 2\sin \theta$$

The remaining geometrical terms are

$$h = R_{\text{out}} - R_{\text{in}} = 2(1 + 2\sin \theta)$$

$$A = bh = 4(1 + 2\sin \theta)$$

$$r_n = \frac{h}{\ln[(R + h/2)/(R - h/2)]} = \frac{2(1 + 2\sin \theta)}{\ln[(33 + 2\sin \theta)/(31 - 2\sin \theta)]}$$

$$e = R - r_n = 32 - r_n$$

Note that

$$M = FR \sin \theta \quad \partial M / \partial F = R \sin \theta$$

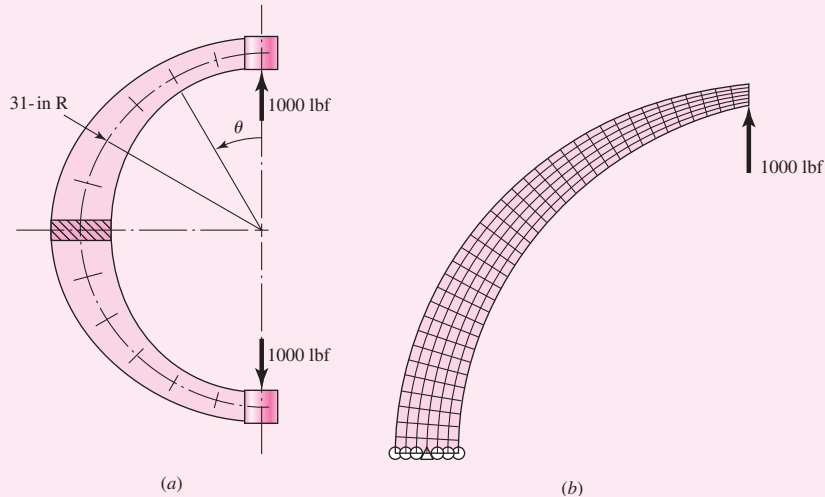
$$F_\theta = F \sin \theta \quad \partial F_\theta / \partial F = \sin \theta$$

$$MF_\theta = F^2 R \sin^2 \theta \quad \partial MF_\theta / \partial F = 2FR \sin^2 \theta$$

$$F_r = F \cos \theta \quad \partial F_r / \partial F = \cos \theta$$

Figure 4-14

(a) A steel punch press has a C frame with a varying-depth rectangular cross section depicted. The cross section varies sinusoidally from 2 in × 2 in at $\theta = 0^\circ$ to 2 in × 6 in at $\theta = 90^\circ$, and back to 2 in × 2 in at $\theta = 180^\circ$. Of immediate interest to the designer is the deflection in the load axis direction under the load.
(b) Finite-element model.



Substitution of the terms into Eq. (4-33) yields three integrals

$$\delta = I_1 + I_2 + I_3 \quad (1)$$

where the integrals are

$$I_1 = 8.5333(10^{-3}) \int_0^\pi \frac{\sin^2 \theta d\theta}{(1 + 2 \sin \theta) \left[32 - \frac{2(1 + 2 \sin \theta)}{\ln \left(\frac{33 + 2 \sin \theta}{31 - 2 \sin \theta} \right)} \right]} \quad (2)$$

$$I_2 = -2.6667(10^{-4}) \int_0^\pi \frac{\sin^2 \theta d\theta}{1 + 2 \sin \theta} \quad (3)$$

$$I_3 = 8.3478(10^{-4}) \int_0^\pi \frac{\cos^2 \theta d\theta}{1 + 2 \sin \theta} \quad (4)$$

The integrals may be evaluated in a number of ways: by a program using Simpson's rule integration,⁸ by a program using a spreadsheet, or by mathematics software. Using MathCad and checking the results with Excel gives the integrals as $I_1 = 0.076\ 615$, $I_2 = -0.000\ 159$, and $I_3 = 0.000\ 773$. Substituting these into Eq. (1) gives

Answer

$$\delta = 0.077\ 23\ \text{in}$$

Finite-element (FE) programs are also very accessible. Figure 4-14b shows a simple half-model, using symmetry, of the press consisting of 216 plane-stress (2-D) elements. Creating the model and analyzing it to obtain a solution took minutes. Doubling the results from the FE analysis yielded $\delta = 0.07790$ in, a less than 1 percent variation from the results of the numerical integration.

⁸See Case Study 4, p. 203, J. E. Shigley and C. R. Mischke, *Mechanical Engineering Design*, 6th ed., McGraw-Hill, New York, 2001.

4-10 Statically Indeterminate Problems

A system in which the laws of statics are not sufficient to determine all the unknown forces or moments is said to be *statically indeterminate*. Problems of which this is true are solved by writing the appropriate equations of static equilibrium and additional equations pertaining to the deformation of the part. In all, the number of equations must equal the number of unknowns.

A simple example of a statically indeterminate problem is furnished by the nested helical springs in Fig. 4-15a. When this assembly is loaded by the compressive force F , it deforms through the distance δ . What is the compressive force in each spring?

Only one equation of static equilibrium can be written. It is

$$\sum F = F - F_1 - F_2 = 0 \quad (a)$$

which simply says that the total force F is resisted by a force F_1 in spring 1 plus the force F_2 in spring 2. Since there are two unknowns and only one equation, the system is statically indeterminate.

To write another equation, note the deformation relation in Fig. 4-15b. The two springs have the same deformation. Thus, we obtain the second equation as

$$\delta_1 = \delta_2 = \delta \quad (b)$$

If we now substitute Eq. (4-2) in Eq. (b), we have

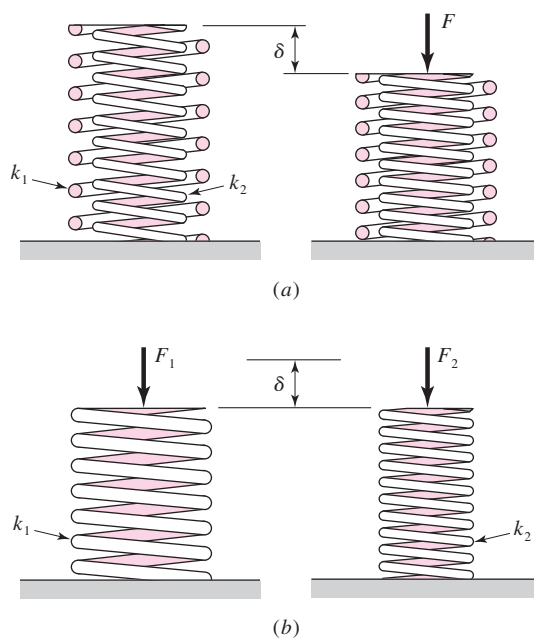
$$\frac{F_1}{k_1} = \frac{F_2}{k_2} \quad (c)$$

Now we solve Eq. (c) for F_1 and substitute the result in Eq. (a). This gives

$$F - \frac{k_1}{k_2} F_2 - F_2 = 0 \quad \text{or} \quad F_2 = \frac{k_2 F}{k_1 + k_2} \quad (d)$$

This completes the solution, because with F_2 known, F_1 can be found from Eq. (c).

| Figure 4-15



In the spring example, obtaining the necessary deformation equation was very straightforward. However, for other situations, the deformation relations may not be as easy. A more structured approach may be necessary. Here we will show two basic procedures for general statically indeterminate problems.

Procedure 1

- 1 Choose the redundant reaction(s). There may be alternative choices (See Example 4–14).
- 2 Write the equations of static equilibrium for the remaining reactions in terms of the applied loads and the redundant reaction(s) of step 1.
- 3 Write the deflection equation(s) for the point(s) at the locations of the redundant reaction(s) of step 1 in terms of the applied loads and the redundant reaction(s) of step 1. Normally the deflection(s) is (are) zero. If a redundant reaction is a moment, the corresponding deflection equation is a rotational deflection equation.
- 4 The equations from steps 2 and 3 can now be solved to determine the reactions.

In step 3 the deflection equations can be solved in any of the standard ways. Here we will demonstrate the use of superposition and Castigliano's theorem on a beam problem.

EXAMPLE 4–14

The indeterminate beam of Appendix Table A–9–11 is reproduced in Fig. 4–16. Determine the reactions using procedure 1.

Solution

The reactions are shown in Fig. 4–16*b*. Without R_2 the beam is a statically determinate cantilever beam. Without M_1 the beam is a statically determinate simply supported beam. In either case, the beam has only *one* redundant support. We will first solve this problem using superposition, choosing R_2 as the redundant reaction. For the second solution, we will use Castigliano's theorem with M_1 as the redundant reaction.

Solution 1

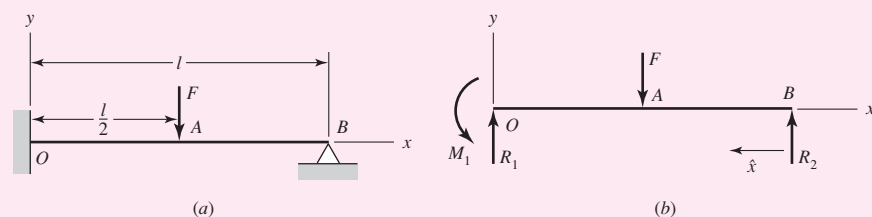
- 1 Choose R_2 at B to be the redundant reaction.
- 2 Using static equilibrium equations solve for R_1 and M_1 in terms of F and R_2 . This results in

$$R_1 = F - R_2 \quad M_1 = \frac{Fl}{2} - R_2l \tag{1}$$

- 3 Write the deflection equation for point B in terms of F and R_2 . Using superposition of Table A–9–1 with $F = -R_2$, and Table A–9–2 with $a = l/2$, the deflection of B , at $x = l$, is

$$\delta_B = -\frac{R_2l^2}{6EI}(l - 3l) + \frac{F(l/2)^2}{6EI}\left(\frac{l}{2} - 3l\right) = \frac{R_2l^3}{3EI} - \frac{5Fl^3}{48EI} = 0 \tag{2}$$

| **Figure 4–16**



4 Equation (2) can be solved for R_2 directly. This yields

$$\text{Answer} \quad R_2 = \frac{5F}{16} \quad (3)$$

Next, substituting R_2 into Eqs. (1) completes the solution, giving

$$\text{Answer} \quad R_1 = \frac{11F}{16} \quad M_1 = \frac{3Fl}{16} \quad (4)$$

Note that the solution agrees with what is given in Table A–9–11.

Solution 2

- 1 Choose M_1 at O to be the redundant reaction.
- 2 Using static equilibrium equations solve for R_1 and R_2 in terms of F and M_1 . This results in

$$R_1 = \frac{F}{2} + \frac{M_1}{l} \quad R_2 = \frac{F}{2} - \frac{M_1}{l} \quad (5)$$

- 3 Since M_1 is the redundant reaction at O , write the equation for the angular deflection at point O . From Castigliano's theorem this is

$$\theta_O = \frac{\partial U}{\partial M_1} \quad (6)$$

We can apply Eq. (4–25), using the variable x as shown in Fig. 4–16*b*. However, simpler terms can be found by using a variable \hat{x} that starts at B and is positive to the left. With this and the expression for R_2 from Eq. (5) the moment equations are

$$M = \left(\frac{F}{2} - \frac{M_1}{l} \right) \hat{x} \quad 0 \leq \hat{x} \leq \frac{l}{2} \quad (7)$$

$$M = \left(\frac{F}{2} - \frac{M_1}{l} \right) \hat{x} - F \left(\hat{x} - \frac{l}{2} \right) \quad \frac{l}{2} \leq \hat{x} \leq l \quad (8)$$

For both equations

$$\frac{\partial M}{\partial M_1} = -\frac{\hat{x}}{l} \quad (9)$$

Substituting Eqs. (7) to (9) in Eq. (6), using the form of Eq. (4–25) where $F_i = M_1$, gives

$$\theta_O = \frac{\partial U}{\partial M_1} = \frac{1}{EI} \left\{ \int_0^{l/2} \left(\frac{F}{2} - \frac{M_1}{l} \right) \hat{x} \left(-\frac{\hat{x}}{l} \right) d\hat{x} + \int_{l/2}^l \left[\left(\frac{F}{2} - \frac{M_1}{l} \right) \hat{x} - F \left(\hat{x} - \frac{l}{2} \right) \right] \left(-\frac{\hat{x}}{l} \right) d\hat{x} \right\} = 0$$

Canceling $1/EI$, and combining the first two integrals, simplifies this quite readily to

$$\left(\frac{F}{2} - \frac{M_1}{l} \right) \int_0^l \hat{x}^2 d\hat{x} - F \int_{l/2}^l \left(\hat{x} - \frac{l}{2} \right) \hat{x} d\hat{x} = 0$$

Integrating gives

$$\left(\frac{F}{2} - \frac{M_1}{l} \right) \frac{l^3}{3} - \frac{F}{3} \left[l^3 - \left(\frac{l}{2} \right)^3 \right] + \frac{Fl}{4} \left[l^2 - \left(\frac{l}{2} \right)^2 \right] = 0$$

which reduces to

$$M_1 = \frac{3Fl}{16} \quad (10)$$

4 Substituting Eq. (10) into (5) results in

$$R_1 = \frac{11F}{16} \quad R_2 = \frac{5F}{16} \quad (11)$$

which again agrees with Table A–9–11.

For some problems even procedure 1 can be a task. Procedure 2 eliminates some tricky geometric problems that would complicate procedure 1. We will describe the procedure for a beam problem.

Procedure 2

- 1 Write the equations of static equilibrium for the beam in terms of the applied loads and unknown restraint reactions.
- 2 Write the deflection equation for the beam in terms of the applied loads and unknown restraint reactions.
- 3 Apply boundary conditions consistent with the restraints.
- 4 Solve the equations from steps 1 and 3.

EXAMPLE 4-15

The rods AD and CE shown in Fig. 4-17a each have a diameter of 10 mm. The second-area moment of beam ABC is $I = 62.5(10^3) \text{ mm}^4$. The modulus of elasticity of the material used for the rods and beam is $E = 200 \text{ GPa}$. The threads at the ends of the rods are single-threaded with a pitch of 1.5 mm. The nuts are first snugly fit with bar ABC horizontal. Next the nut at A is tightened one full turn. Determine the resulting tension in each rod and the deflections of points A and C .

Solution

There is a lot going on in this problem; a rod shortens, the rods stretch in tension, and the beam bends. Let's try the procedure!

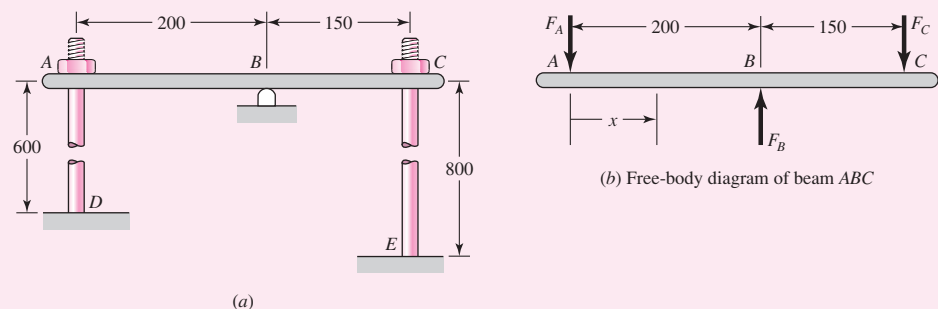
- 1 The free-body diagram of the beam is shown in Fig. 4-17b. Summing forces, and moments about B , gives

$$F_B - F_A - F_C = 0 \quad (1)$$

$$4F_A - 3F_C = 0 \quad (2)$$

Figure 4-17

Dimensions in mm.



- 2 Using singularity functions, we find the moment equation for the beam is

$$M = -F_A x + F_B (x - 0.2)^1$$

where x is in meters. Integration yields

$$\begin{aligned} EI \frac{dy}{dx} &= -\frac{F_A}{2} x^2 + \frac{F_B}{2} (x - 0.2)^2 + C_1 \\ EI y &= -\frac{F_A}{6} x^3 + \frac{F_B}{6} (x - 0.2)^3 + C_1 x + C_2 \end{aligned} \quad (3)$$

The term $EI = 200(10^9) 62.5(10^{-9}) = 1.25(10^4) \text{ N} \cdot \text{m}^2$.

- 3 The upward deflection of point A is $(Fl/AE)_{AD} - Np$, where the first term is the elastic stretch of AD , N is the number of turns of the nut, and p is the pitch of the thread. Thus, the deflection of A is

$$\begin{aligned} y_A &= \frac{F_A(0.6)}{\frac{\pi}{4}(0.010)^2(200)(10^9)} - (1)(0.0015) \\ &= 3.8197(10^{-8})F_A - 1.5(10^{-3}) \end{aligned} \quad (4)$$

The upward deflection of point C is $(Fl/AE)_{CE}$, or

$$y_C = \frac{F_C(0.8)}{\frac{\pi}{4}(0.010)^2(200)(10^9)} = 5.093(10^{-8})F_C \quad (5)$$

Equations (4) and (5) will now serve as the boundary conditions for Eq. (3). At $x = 0$, $y = y_A$. Substituting Eq. (4) into (3) with $x = 0$ and $EI = 1.25(10^4)$, noting that the singularity function is zero for $x = 0$, gives

$$-4.7746(10^{-4})F_A + C_2 = -18.75 \quad (6)$$

At $x = 0.2 \text{ m}$, $y = 0$, and Eq. (3) yields

$$-1.3333(10^{-3})F_A + 0.2C_1 + C_2 = 0 \quad (7)$$

At $x = 0.35 \text{ m}$, $y = y_C$. Substituting Eq. (5) into (3) with $x = 0.35 \text{ m}$ and $EI = 1.25(10^4)$ gives

$$-7.1458(10^{-3})F_A + 5.625(10^{-4})F_B - 6.3662(10^{-4})F_C + 0.35C_1 + C_2 = 0 \quad (8)$$

Equations (1), (2), (6), (7), and (8) are five equations in F_A , F_B , F_C , C_1 , and C_2 . Written in matrix form, they are

$$\begin{bmatrix} -1 & 1 & -1 & 0 & 0 \\ 4 & 0 & -3 & 0 & 0 \\ -4.7746(10^{-4}) & 0 & 0 & 0 & 1 \\ -1.3333(10^{-3}) & 0 & 0 & 0.2 & 1 \\ -7.1458(10^{-3}) & 5.625(10^{-4}) & -6.3662(10^{-4}) & 0.35 & 1 \end{bmatrix} \begin{Bmatrix} F_A \\ F_B \\ F_C \\ C_1 \\ C_2 \end{Bmatrix} = \begin{Bmatrix} 0 \\ 0 \\ -18.75 \\ 0 \\ 0 \end{Bmatrix}$$

Solving these equations yields

$$\begin{aligned} \text{Answer} \quad F_A &= 2988 \text{ N} & F_B &= 6971 \text{ N} & F_C &= 3983 \text{ N} \\ C_1 &= 106.54 \text{ N} \cdot \text{m}^2 & C_2 &= -17.324 \text{ N} \cdot \text{m}^3 \end{aligned}$$

Equation (3) can be reduced to

$$y = -(39.84x^3 - 92.95(x - 0.2)^3 - 8.523x + 1.386)(10^{-3})$$

Answer

$$\text{At } x = 0, y = y_A = -1.386(10^{-3}) \text{ m} = -1.386 \text{ mm.}$$

Answer

$$\begin{aligned} \text{At } x = 0.35 \text{ m, } y = y_C = & -[39.84(0.35)^3 - 92.95(0.35 - 0.2)^3 - 8.523(0.35) \\ & + 1.386](10^{-3}) = 0.203(10^{-3}) \text{ m} = 0.203 \text{ mm} \end{aligned}$$

Note that we could have easily incorporated the stiffness of the support at B if we were given a spring constant.

4-11 Compression Members—General

The analysis and design of compression members can differ significantly from that of members loaded in tension or in torsion. If you were to take a long rod or pole, such as a meterstick, and apply gradually increasing compressive forces at each end, nothing would happen at first, but then the stick would bend (buckle), and finally bend so much as to fracture. Try it. The other extreme would occur if you were to saw off, say, a 5-mm length of the meterstick and perform the same experiment on the short piece. You would then observe that the failure exhibits itself as a mashing of the specimen, that is, a simple compressive failure. For these reasons it is convenient to classify compression members according to their length and according to whether the loading is central or eccentric. The term *column* is applied to all such members except those in which failure would be by simple or pure compression. Columns can be categorized then as:

- 1 Long columns with central loading
- 2 Intermediate-length columns with central loading
- 3 Columns with eccentric loading
- 4 Struts or short columns with eccentric loading

Classifying columns as above makes it possible to develop methods of analysis and design specific to each category. Furthermore, these methods will also reveal whether or not you have selected the category appropriate to your particular problem. The four sections that follow correspond, respectively, to the four categories of columns listed above.

4-12 Long Columns with Central Loading

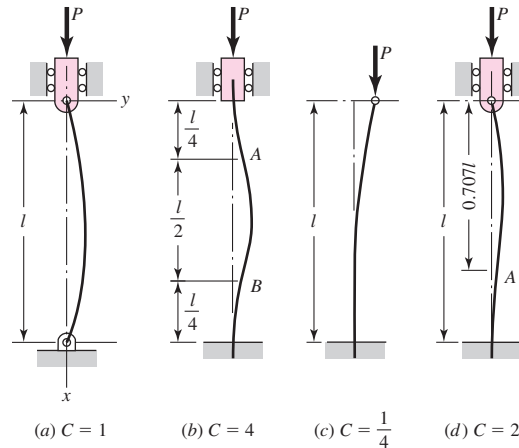
Figure 4-18 shows long columns with differing end (boundary) conditions. If the axial force P shown acts along the centroidal axis of the column, simple compression of the member occurs for low values of the force. However, under certain conditions, when P reaches a specific value, the column becomes *unstable* and bending as shown in Fig. 4-18 develops rapidly. This force is determined by writing the bending deflection equation for the column, resulting in a differential equation where when the boundary conditions are applied, results in the *critical load* for unstable bending.⁹ The critical force for the pin-ended column of Fig. 4-18a is given by

$$P_{cr} = \frac{\pi^2 EI}{l^2} \quad (4-39)$$

⁹See F. P. Beer, E. R. Johnston, Jr., and J. T. DeWolf, *Mechanics of Materials*, 4th ed., McGraw-Hill, New York, 2006, pp. 610–613.

Figure 4-18

(a) Both ends rounded or pivoted; (b) both ends fixed; (c) one end free and one end fixed; (d) one end rounded and pivoted, and one end fixed.



which is called the *Euler column formula*. Equation (4-39) can be extended to apply to other end-conditions by writing

$$P_{cr} = \frac{C\pi^2 EI}{l^2} \quad (4-40)$$

where the constant C depends on the end conditions as shown in Fig. 4-18.

Using the relation $I = Ak^2$, where A is the area and k the radius of gyration, enables us to rearrange Eq. (4-40) into the more convenient form

$$\frac{P_{cr}}{A} = \frac{C\pi^2 E}{(l/k)^2} \quad (4-41)$$

where l/k is called the *slenderness ratio*. This ratio, rather than the actual column length, will be used in classifying columns according to length categories.

The quantity P_{cr}/A in Eq. (4-41) is the *critical unit load*. It is the load per unit area necessary to place the column in a condition of *unstable equilibrium*. In this state any small crookedness of the member, or slight movement of the support or load, will cause the column to begin to collapse. The unit load has the same units as strength, but this is the strength of a specific column, not of the column material. Doubling the length of a member, for example, will have a drastic effect on the value of P_{cr}/A but no effect at all on, say, the yield strength S_y of the column material itself.

Equation (4-41) shows that the critical unit load depends only upon the modulus of elasticity and the slenderness ratio. Thus a column obeying the Euler formula made of high-strength alloy steel is *no stronger* than one made of low-carbon steel, since E is the same for both.

The factor C is called the *end-condition constant*, and it may have any one of the theoretical values $\frac{1}{4}$, 1, 2, and 4, depending upon the manner in which the load is applied. In practice it is difficult, if not impossible, to fix the column ends so that the factor $C = 2$ or $C = 4$ would apply. Even if the ends are welded, some deflection will occur. Because of this, some designers never use a value of C greater than unity. However, if liberal factors of safety are employed, and if the column load is accurately known, then a value of C not exceeding 1.2 for both ends fixed, or for one end rounded and one end fixed, is not unreasonable, since it supposes only partial fixation. Of course, the value $C = \frac{1}{4}$ must always be used for a column having one end fixed and one end free. These recommendations are summarized in Table 4-2.

Table 4-2

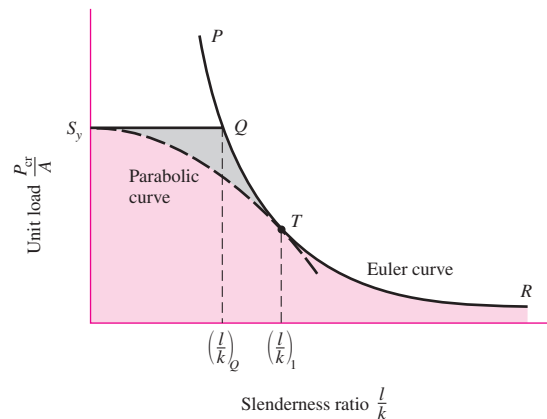
End-Condition Constants for Euler Columns [to Be Used with Eq. (4-40)]

Column End Conditions	End-Condition Constant C		
	Theoretical Value	Conservative Value	Recommended Value*
Fixed-free	$\frac{1}{4}$	$\frac{1}{4}$	$\frac{1}{4}$
Rounded-rounded	1	1	1
Fixed-rounded	2	1	1.2
Fixed-fixed	4	1	1.2

*To be used only with liberal factors of safety when the column load is accurately known.

Figure 4-19

Euler curve plotted using Eq. (4-40) with $C = 1$.



When Eq. (4-41) is solved for various values of the unit load P_{cr}/A in terms of the slenderness ratio l/k , we obtain the curve PQR shown in Fig. 4-19. Since the yield strength of the material has the same units as the unit load, the horizontal line through S_y and Q has been added to the figure. This would appear to make the figure cover the entire range of compression problems from the shortest to the longest compression member. Thus it would appear that any compression member having an l/k value less than $(l/k)_Q$ should be treated as a pure compression member while all others are to be treated as Euler columns. Unfortunately, this is not true.

In the actual design of a member that functions as a column, the designer will be aware of the end conditions shown in Fig. 4-18, and will endeavor to configure the ends, using bolts, welds, or pins, for example, so as to achieve the required ideal end conditions. In spite of these precautions, the result, following manufacture, is likely to contain defects such as initial crookedness or load eccentricities. The existence of such defects and the methods of accounting for them will usually involve a factor-of-safety approach or a stochastic analysis. These methods work well for long columns and for simple compression members. However, tests show numerous failures for columns with slenderness ratios below and in the vicinity of point Q , as shown in the shaded area in Fig. 4-19. These have been reported as occurring even when near-perfect geometric specimens were used in the testing procedure.

A column failure is always sudden, total, unexpected, and hence dangerous. There is no advance warning. A beam will bend and give visual warning that it is overloaded, but not so for a column. For this reason neither simple compression methods nor the

Euler column equation should be used when the slenderness ratio is near $(l/k)_Q$. Then what should we do? The usual approach is to choose some point T on the Euler curve of Fig. 4–19. If the slenderness ratio is specified as $(l/k)_1$ corresponding to point T , then use the Euler equation only when the actual slenderness ratio is greater than $(l/k)_1$. Otherwise, use one of the methods in the sections that follow. See Examples 4–17 and 4–18.

Most designers select point T such that $P_{cr}/A = S_y/2$. Using Eq. (4–40), we find the corresponding value of $(l/k)_1$ to be

$$\left(\frac{l}{k}\right)_1 = \left(\frac{2\pi^2 CE}{S_y}\right)^{1/2} \quad (4-42)$$

4–13 Intermediate-Length Columns with Central Loading

Over the years there have been a number of column formulas proposed and used for the range of l/k values for which the Euler formula is not suitable. Many of these are based on the use of a single material; others, on a so-called safe unit load rather than the critical value. Most of these formulas are based on the use of a linear relationship between the slenderness ratio and the unit load. The *parabolic* or *J. B. Johnson formula* now seems to be the preferred one among designers in the machine, automotive, aircraft, and structural-steel construction fields.

The general form of the parabolic formula is

$$\frac{P_{cr}}{A} = a - b \left(\frac{l}{k}\right)^2 \quad (a)$$

where a and b are constants that are evaluated by fitting a parabola to the Euler curve of Fig. 4–19 as shown by the dashed line ending at T . If the parabola is begun at S_y , then $a = S_y$. If point T is selected as previously noted, then Eq. (a) gives the value of $(l/k)_1$ and the constant b is found to be

$$b = \left(\frac{S_y}{2\pi}\right)^2 \frac{1}{CE} \quad (b)$$

Upon substituting the known values of a and b into Eq. (a), we obtain, for the parabolic equation,

$$\frac{P_{cr}}{A} = S_y - \left(\frac{S_y}{2\pi} \frac{l}{k}\right)^2 \frac{1}{CE} \quad \frac{l}{k} \leq \left(\frac{l}{k}\right)_1 \quad (4-43)$$

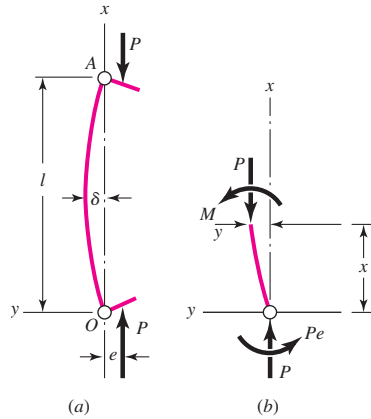
4–14 Columns with Eccentric Loading

We have noted before that deviations from an ideal column, such as load eccentricities or crookedness, are likely to occur during manufacture and assembly. Though these deviations are often quite small, it is still convenient to have a method of dealing with them. Frequently, too, problems occur in which load eccentricities are unavoidable.

Figure 4–20a shows a column in which the line of action of the column forces is separated from the centroidal axis of the column by the eccentricity e . This problem is developed by using Eq. (4–12) and the free-body diagram of Fig. 4–20b.

Figure 4-20

Notation for an eccentrically loaded column.



This results in the differential equation

$$\frac{d^2y}{dx^2} + \frac{P}{EI}y = -\frac{Pe}{EI} \quad (a)$$

The solution of Eq. (a), for the boundary conditions that $y = 0$ at $x = 0, l$ is

$$y = e \left[\tan\left(\frac{l}{2}\sqrt{\frac{P}{EI}}\right) \sin\left(\sqrt{\frac{P}{EI}}x\right) + \cos\left(\sqrt{\frac{P}{EI}}x\right) - 1 \right] \quad (b)$$

By substituting $x = l/2$ in Eq. (b) and using a trigonometric identity, we obtain

$$\delta = e \left[\sec\left(\sqrt{\frac{P}{EI}} \frac{l}{2}\right) - 1 \right] \quad (4-44)$$

The maximum bending moment also occurs at midspan and is

$$M_{\max} = -P(e + \delta) = -Pe \sec\left(\frac{l}{2}\sqrt{\frac{P}{EI}}\right) \quad (4-45)$$

The magnitude of the maximum *compressive* stress at midspan is found by superposing the axial component and the bending component. This gives

$$\sigma_c = \frac{P}{A} - \frac{Mc}{I} = \frac{P}{A} - \frac{Mc}{Ak^2} \quad (c)$$

Substituting M_{\max} from Eq. (4-45) yields

$$\sigma_c = \frac{P}{A} \left[1 + \frac{ec}{k^2} \sec\left(\frac{l}{2k}\sqrt{\frac{P}{EA}}\right) \right] \quad (4-46)$$

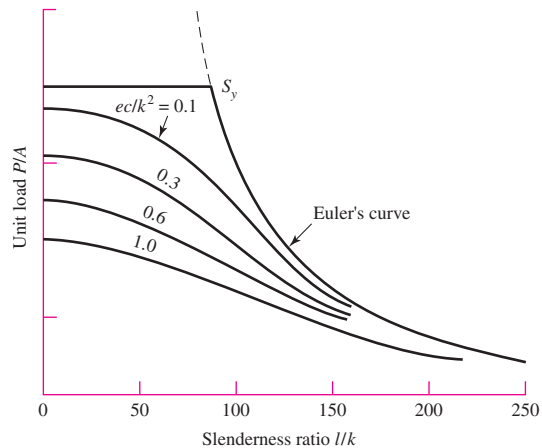
By imposing the compressive yield strength S_{yc} as the maximum value of σ_c , we can write Eq. (4-46) in the form

$$\frac{P}{A} = \frac{S_{yc}}{1 + (ec/k^2) \sec[(l/2k)\sqrt{P/AE}]} \quad (4-47)$$

This is called the *secant column formula*. The term ec/k^2 is called the *eccentricity ratio*. Figure 4-21 is a plot of Eq. (4-47) for a steel having a compressive (and tensile)

Figure 4-21

Comparison of secant and Euler equations for steel with $S_y = 40$ kpsi.



yield strength of 40 kpsi. Note how the P/A contours asymptotically approach the Euler curve as l/k increases.

Equation (4-47) cannot be solved explicitly for the load P . Design charts, in the fashion of Fig. 4-21, can be prepared for a single material if much column design is to be done. Otherwise, a root-finding technique using numerical methods must be used.

EXAMPLE 4-16

Develop specific Euler equations for the sizes of columns having

- Round cross sections
- Rectangular cross sections

Solution

(a) Using $A = \pi d^2/4$ and $k = \sqrt{I/A} = [(\pi d^4/64)/(\pi d^2/4)]^{1/2} = d/4$ with Eq. (4-41) gives

Answer

$$d = \left(\frac{64P_{cr}l^2}{\pi^3CE} \right)^{1/4} \quad (4-48)$$

(b) For the rectangular column, we specify a cross section $h \times b$ with the restriction that $h \leq b$. If the end conditions are the *same* for buckling in both directions, then buckling will occur in the direction of the least thickness. Therefore

$$I = \frac{bh^3}{12} \quad A = bh \quad k^2 = I/A = \frac{h^2}{12}$$

Substituting these in Eq. (4-41) gives

Answer

$$b = \frac{12P_{cr}l^2}{\pi^2CEh^3} \quad (4-49)$$

Note, however, that rectangular columns do not generally have the same end conditions in both directions.

EXAMPLE 4-17 Specify the diameter of a round column 1.5 m long that is to carry a maximum load estimated to be 22 kN. Use a design factor $n_d = 4$ and consider the ends as pinned (rounded). The column material selected has a minimum yield strength of 500 MPa and a modulus of elasticity of 207 GPa.

Solution We shall design the column for a critical load of

$$P_{cr} = n_d P = 4(22) = 88 \text{ kN}$$

Then, using Eq. (4-48) with $C = 1$ (see Table 4-2) gives

$$d = \left(\frac{64 P_{cr} l^2}{\pi^3 C E} \right)^{1/4} = \left[\frac{64(88)(1.5)^2}{\pi^3(1)(207)} \right]^{1/4} \left(\frac{10^3}{10^9} \right)^{1/4} (10^3) = 37.48 \text{ mm}$$

Table A-17 shows that the preferred size is 40 mm. The slenderness ratio for this size is

$$\frac{l}{k} = \frac{l}{d/4} = \frac{1.5(10^3)}{40/4} = 150$$

To be sure that this is an Euler column, we use Eq. (5-48) and obtain

$$\left(\frac{l}{k} \right)_1 = \left(\frac{2\pi^2 C E}{S_y} \right)^{1/2} = \left[\frac{2\pi^2(1)(207)}{500} \right]^{1/2} \left(\frac{10^9}{10^6} \right)^{1/2} = 90.4$$

which indicates that it is indeed an Euler column. So select

Answer

$$d = 40 \text{ mm}$$

EXAMPLE 4-18 Repeat Ex. 4-16 for J. B. Johnson columns.

Solution (a) For round columns, Eq. (4-43) yields

$$\text{Answer} \quad d = 2 \left(\frac{P_{cr}}{\pi S_y} + \frac{S_y l^2}{\pi^2 C E} \right)^{1/2} \quad (4-50)$$

(b) For a rectangular section with dimensions $h \leq b$, we find

$$\text{Answer} \quad b = \frac{P_{cr}}{h S_y \left(1 - \frac{3l^2 S_y}{\pi^2 C E h^2} \right)} \quad h \leq b \quad (4-51)$$

EXAMPLE 4-19 Choose a set of dimensions for a rectangular link that is to carry a maximum compressive load of 5000 lbf. The material selected has a minimum yield strength of 75 kpsi and a modulus of elasticity $E = 30$ Mpsi. Use a design factor of 4 and an end condition constant $C = 1$ for buckling in the weakest direction, and design for (a) a length of 15 in, and (b) a length of 8 in with a minimum thickness of $\frac{1}{2}$ in.

Solution (a) Using Eq. (4-41), we find the limiting slenderness ratio to be

$$\left(\frac{l}{k}\right)_1 = \left(\frac{2\pi^2 CE}{S_y}\right)^{1/2} = \left[\frac{2\pi^2(1)(30)(10^6)}{75(10)^3}\right]^{1/2} = 88.9$$

By using $P_{cr} = n_d P = 4(5000) = 20\,000$ lbf, Eqs. (4-49) and (4-51) are solved, using various values of h , to form Table 4-3. The table shows that a cross section of $\frac{5}{8}$ by $\frac{3}{4}$ in, which is marginally suitable, gives the least area.

(b) An approach similar to that in part (a) is used with $l = 8$ in. All trial computations are found to be in the J. B. Johnson region of l/k values. A minimum area occurs when the section is a near square. Thus a cross section of $\frac{1}{2}$ by $\frac{3}{4}$ in is found to be suitable and safe.

Table 4-3

Table Generated to
Solve Ex. 4-19, part (a)

h	b	A	l/k	Type	Eq. No.
0.375	3.46	1.298	139	Euler	(4-49)
0.500	1.46	0.730	104	Euler	(4-49)
0.625	0.76	0.475	83	Johnson	(4-51)
0.5625	1.03	0.579	92	Euler	(4-49)

4-15 Struts or Short Compression Members

A short bar loaded in pure compression by a force P acting along the centroidal axis will shorten in accordance with Hooke's law, until the stress reaches the elastic limit of the material. At this point, permanent set is introduced and usefulness as a machine member may be at an end. If the force P is increased still more, the material either becomes "barrel-like" or fractures. When there is eccentricity in the loading, the elastic limit is encountered at smaller loads.

A *strut* is a *short compression member* such as the one shown in Fig. 4-22. The magnitude of the maximum compressive stress in the x direction at point B in an intermediate section is the sum of a simple component P/A and a flexural component Mc/I ; that is,

$$\sigma_c = \frac{P}{A} + \frac{Mc}{I} = \frac{P}{A} + \frac{PecA}{IA} = \frac{P}{A} \left(1 + \frac{ec}{k^2}\right) \quad (4-52)$$

where $k = (I/A)^{1/2}$ and is the radius of gyration, c is the coordinate of point B , and e is the eccentricity of loading.

Note that the length of the strut does not appear in Eq. (4-52). In order to use the equation for design or analysis, we ought, therefore, to know the range of lengths for which the equation is valid. In other words, how long is a short member?

The difference between the secant formula Eq. (4-47) and Eq. (4-52) is that the secant equation, unlike Eq. (4-52), accounts for an increased bending moment due to bending deflection. Thus the secant equation shows the eccentricity to be magnified by the bending deflection. This difference between the two formulas suggests that one way

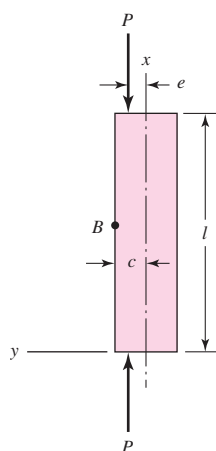


Figure 4-22

Eccentrically loaded strut.

of differentiating between a “secant column” and a strut, or short compression member, is to say that in a strut, the effect of bending deflection must be limited to a certain small percentage of the eccentricity. If we decide that the limiting percentage is to be 1 percent of e , then, from Eq. (4–44), the limiting slenderness ratio turns out to be

$$\left(\frac{l}{k}\right)_2 = 0.282 \left(\frac{AE}{P}\right)^{1/2} \quad (4-53)$$

This equation then gives the limiting slenderness ratio for using Eq. (4–52). If the actual slenderness ratio is greater than $(l/k)_2$, then use the secant formula; otherwise, use Eq. (4–52).

EXAMPLE 4-20

Figure 4–23a shows a workpiece clamped to a milling machine table by a bolt tightened to a tension of 2000 lbf. The clamp contact is offset from the centroidal axis of the strut by a distance $e = 0.10$ in, as shown in part b of the figure. The strut, or block, is steel, 1 in square and 4 in long, as shown. Determine the maximum compressive stress in the block.

Solution

First we find $A = bh = 1(1) = 1 \text{ in}^2$, $I = bh^3/12 = 1(1)^3/12 = 0.0833 \text{ in}^4$, $k^2 = I/A = 0.0833/1 = 0.0833 \text{ in}^2$, and $l/k = 4/(0.0833)^{1/2} = 13.9$. Equation (4–53) gives the limiting slenderness ratio as

$$\left(\frac{l}{k}\right)_2 = 0.282 \left(\frac{AE}{P}\right)^{1/2} = 0.282 \left[\frac{1(30)(10^6)}{1000}\right]^{1/2} = 48.8$$

Thus the block could be as long as

$$l = 48.8k = 48.8(0.0833)^{1/2} = 14.1 \text{ in}$$

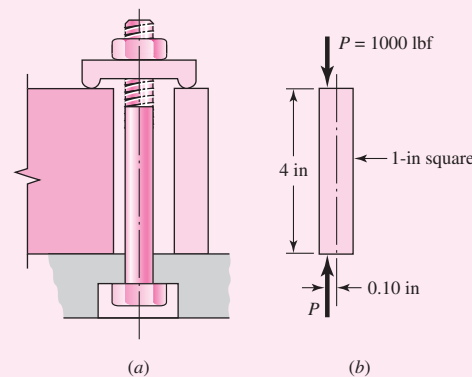
before it need be treated by using the secant formula. So Eq. (4–52) applies and the maximum compressive stress is

Answer

$$\sigma_c = \frac{P}{A} \left(1 + \frac{ec}{k^2}\right) = \frac{1000}{1} \left[1 + \frac{0.1(0.5)}{0.0833}\right] = 1600 \text{ psi}$$

Figure 4-23

A strut that is part of a workpiece clamping assembly.



4-16 Elastic Stability

Section 4-12 presented the conditions for the unstable behavior of long, slender columns. *Elastic instability* can also occur in structural members other than columns. *Compressive loads/stresses within any long, thin structure can cause structural instabilities* (buckling). The compressive stress may be elastic or inelastic and the instability may be global or local. Global instabilities can cause *catastrophic* failure, whereas local instabilities may cause permanent deformation and function failure but not a catastrophic failure. The buckling discussed in Sec. 4-12 was global instability. However, consider a wide flange beam in bending. One flange will be in compression, and if thin enough, can develop localized buckling in a region where the bending moment is a maximum. Localized buckling can also occur in the web of the beam, where transverse shear stresses are present at the beam centroid. Recall, for the case of pure shear stress τ , a stress transformation will show that at 45° , a *compressive stress* of $\sigma = -\tau$ exists. If the web is sufficiently thin where the shear force V is a maximum, localized buckling of the web can occur. For this reason, additional support in the form of bracing is typically applied at locations of high shear forces.¹⁰

Thin-walled beams in bending can buckle in a torsional mode as illustrated in Fig. 4-24. Here a cantilever beam is loaded with a lateral force, F . As F is increased from zero, the end of the beam will deflect in the negative y direction normally according to the bending equation, $y = -FL^3/(3EI)$. However, if the beam is long enough and the ratio of b/h is sufficiently small, there is a critical value of F for which the beam will collapse in a twisting mode as shown. This is due to the *compression* in the bottom fibers of the beam which cause the fibers to buckle sideways (z direction).

There are a great many other examples of unstable structural behavior, such as thin-walled pressure vessels in compression or with outer pressure or inner vacuum, thin-walled open or closed members in torsion, thin arches in compression, frames in compression, and shear panels. Because of the vast array of applications and the complexity of their analyses, further elaboration is beyond the scope of this book. The intent of this section is to make the reader aware of the possibilities and potential safety issues. The key issue is that the designer should be aware that if any *unbraced* part of a structural member is *thin*, and/or *long*, and in *compression* (directly or *indirectly*), the possibility of buckling should be investigated.¹¹

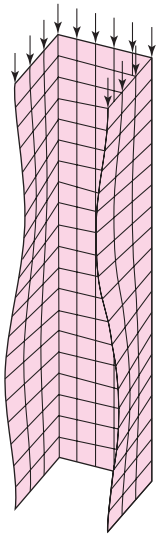
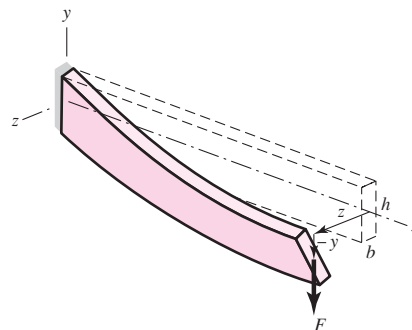


Figure 4-25

Finite-element representation of flange buckling of a channel in compression.

Figure 4-24

Torsional buckling of a thin-walled beam in bending.



¹⁰See C. G. Salmon and J. E. Johnson, *Steel Structures: Design and Behavior*, 4th ed., Harper, Collins, New York, 1996.

¹¹See S. P. Timoshenko and J. M. Gere, *Theory of Elastic Stability*, 2nd ed., McGraw-Hill, New York, 1961. See also, Z. P. Bazant and L. Cedolin, *Stability of Structures*, Oxford University Press, New York, 1991.

For unique applications, the designer may need to revert to a numerical solution such as using finite elements. Depending on the application and the finite-element code available, an analysis can be performed to determine the critical loading (see Fig. 4–25).

4-17 Shock and Impact

Impact refers to the collision of two masses with initial relative velocity. In some cases it is desirable to achieve a known impact in design; for example, this is the case in the design of coining, stamping, and forming presses. In other cases, impact occurs because of excessive deflections, or because of clearances between parts, and in these cases it is desirable to minimize the effects. The rattling of mating gear teeth in their tooth spaces is an impact problem caused by shaft deflection and the clearance between the teeth. This impact causes gear noise and fatigue failure of the tooth surfaces. The clearance space between a cam and follower or between a journal and its bearing may result in crossover impact and also cause excessive noise and rapid fatigue failure.

Shock is a more general term that is used to describe any suddenly applied force or disturbance. Thus the study of shock includes impact as a special case.

Figure 4–26 represents a highly simplified mathematical model of an automobile in collision with a rigid obstruction. Here m_1 is the lumped mass of the engine. The displacement, velocity, and acceleration are described by the coordinate x_1 and its time derivatives. The lumped mass of the vehicle less the engine is denoted by m_2 , and its motion by the coordinate x_2 and its derivatives. Springs k_1 , k_2 , and k_3 represent the linear and nonlinear stiffnesses of the various structural elements that compose the vehicle. Friction and damping can and should be included, but is not shown in this model. The determination of the spring rates for such a complex structure will almost certainly have to be performed experimentally. Once these values—the k 's, m 's, damping and frictional coefficients—are obtained, a set of nonlinear differential equations can be written and a computer solution obtained for any impact velocity.

Figure 4–27 is another impact model. Here mass m_1 has an initial velocity v and is just coming into contact with spring k_1 . The part or structure to be analyzed is represented by mass m_2 and spring k_2 . The problem facing the designer is to find the maximum deflection of m_2 and the maximum force exerted by k_2 against m_2 . In the analysis it doesn't matter whether k_1 is fastened to m_1 or to m_2 , since we are interested

Figure 4-26

Two-degree-of-freedom mathematical model of an automobile in collision with a rigid obstruction.

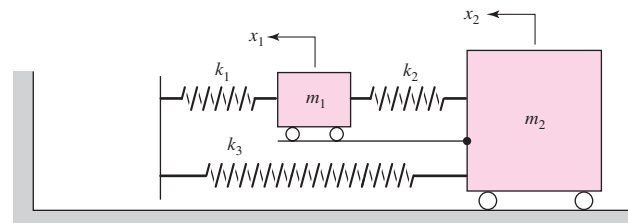
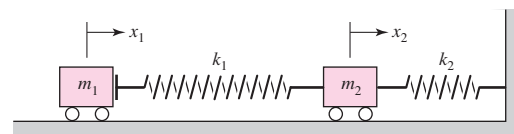


Figure 4-27



only in a solution up to the point in time for which x_2 reaches a maximum. That is, the solution for the rebound isn't needed. The differential equations are not difficult to derive. They are

$$\begin{aligned} m_1 \ddot{x}_1 + k_1(x_1 - x_2) &= 0 \\ m_2 \ddot{x}_2 + k_2 x_2 - k_1(x_1 - x_2) &= 0 \end{aligned} \quad (4-54)$$

The analytical solution of Eq. pair (4–54) is harmonic and is studied in a course on mechanical vibrations.¹² If the values of the m 's and k 's are known, the solution can be obtained easily using a program such as MATLAB.

4–18 Suddenly Applied Loading

A simple case of impact is illustrated in Fig. 4–28*a*. Here a weight W falls a distance h and impacts a cantilever of stiffness EI and length l . We want to find the maximum deflection and the maximum force exerted on the beam due to the impact.

Figure 4–28*b* shows an abstract model of the system. Using Table A–9–1, we find the spring rate to be $k = F/y = 3EI/l^3$. The beam mass and damping can be accounted for, but for this example will be considered negligible. The origin of the coordinate y corresponds to the point where the weight is released. Two free-body diagrams, shown in Fig. 4–28*c* and *d* are necessary. The first corresponds to $y \leq h$, and the second when $y > h$ to account for the spring force.

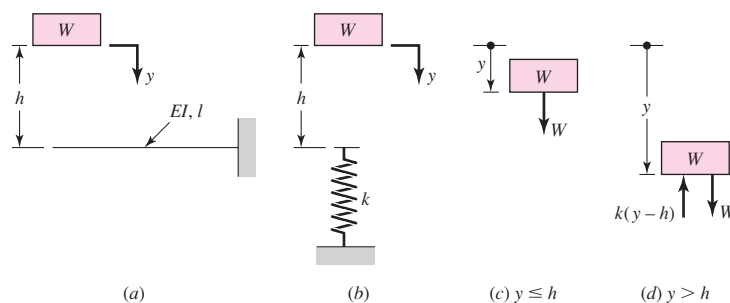
For each of these free-body diagrams we can write Newton's law by stating that the inertia force $(W/g)\ddot{y}$ is equal to the sum of the external forces acting on the weight. We then have

$$\begin{aligned} \frac{W}{g} \ddot{y} &= W & y \leq h \\ \frac{W}{g} \ddot{y} &= -k(y - h) + W & y > h \end{aligned} \quad (a)$$

We must also include in the mathematical statement of the problem the knowledge that the weight is released with zero initial velocity. Equation pair (a) constitutes a set of *piecewise differential equations*. Each equation is linear, but each applies only for a certain range of y .

Figure 4–28

(a) A weight free to fall a distance h to free end of a beam. (b) Equivalent spring model. (c) Free body of weight during fall. (d) Free body of weight during arrest.



¹²See William T. Thomson and Marie Dillon Dahleh, *Theory of Vibrations with Applications*, Prentice Hall, 5th ed., 1998.

The solution to the set is valid for all values of t , but we are interested in values of y only up until the time that the spring or structure reaches its maximum deflection.

The solution to the first equation in the set is

$$y = \frac{gt^2}{2} \quad y \leq h \quad (4-55)$$

and you can verify this by direct substitution. Equation (4-55) is no longer valid after $y = h$; call this time t_1 . Then

$$t_1 = \sqrt{2h/g} \quad (b)$$

Differentiating Eq. (4-55) to get the velocity gives

$$\dot{y} = gt \quad y \leq h \quad (c)$$

and so the velocity of the weight at $t = t_1$ is

$$\dot{y}_1 = gt_1 = g\sqrt{2h/g} = \sqrt{2gh} \quad (d)$$

Having moved from $y = 0$ to $y = h$, we then need to solve the second equation of the set (a). It is convenient to define a new time $t' = t - t_1$. Thus $t' = 0$ at the instant the weight strikes the spring. Applying your knowledge of differential equations, you should find the solution to be

$$y = A \cos \omega t' + B \sin \omega t' + h + \frac{W}{k} \quad y > h \quad (e)$$

where

$$\omega = \sqrt{\frac{kg}{W}} \quad (4-56)$$

is the circular frequency of vibration. The initial conditions for the beam motion at $t' = 0$, are $y = h$ and $\dot{y} = \dot{y}_1 = \sqrt{2gh}$ (neglecting the mass of the beam, the velocity is the same as the weight at $t' = 0$). Substituting the initial conditions into Eq. (e) yields A and B , and Eq. (e) becomes

$$y = -\frac{W}{k} \cos \omega t' + \sqrt{\frac{2Wh}{k}} \sin \omega t' + h + \frac{W}{k} \quad y > h \quad (f)$$

Let $-W/k = C \cos \phi$ and $\sqrt{2Wh/k} = C \sin \phi$, where it can be shown that $C = [(W/k)^2 + 2Wh/k]^{1/2}$. Substituting this into Eq. (f) and using a trigonometric identity gives

$$y = \left[\left(\frac{W}{k} \right)^2 + \frac{2Wh}{k} \right]^{1/2} \cos[\omega t' - \phi] + h + \frac{W}{k} \quad y > h \quad (4-57)$$

The maximum deflection of the spring (beam) occurs when the cosine term in Eq. (4-57) is unity. We designate this as δ and, after rearranging, find it to be

$$\delta = y_{\max} - h = \frac{W}{k} + \frac{W}{k} \left[1 + \left(\frac{2hk}{W} \right) \right]^{1/2} \quad (4-58)$$

The maximum force acting on the beam is now found to be

$$F = k\delta = W + W \left[1 + \left(\frac{2hk}{W} \right) \right]^{1/2} \quad (4-59)$$

Note, in this equation, that if $h = 0$, then $F = 2W$. This says that when the weight is released while in contact with the spring but is not exerting any force on the spring, the largest force is double the weight.

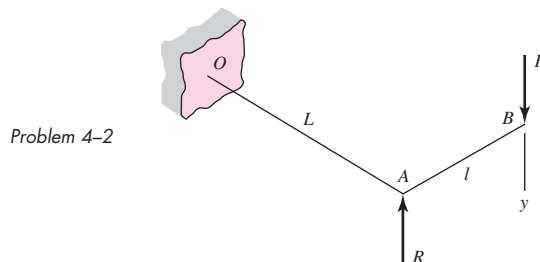
Most systems are not as ideal as those explored here, so be wary about using these relations for nonideal systems.

PROBLEMS

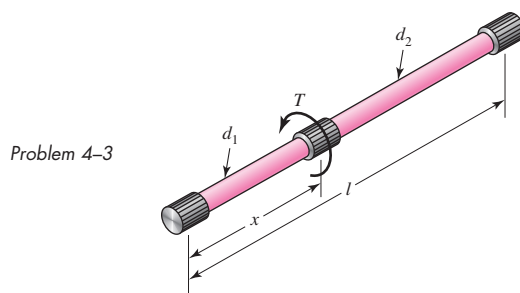
4-1 Structures can often be considered to be composed of a combination of tension and torsion members and beams. Each of these members can be analyzed separately to determine its force-deflection relationship and its spring rate. It is possible, then, to obtain the deflection of a structure by considering it as an assembly of springs having various series and parallel relationships.

- What is the overall spring rate of three springs in series?
- What is the overall spring rate of three springs in parallel?
- What is the overall spring rate of a single spring in series with a pair of parallel springs?

4-2 The figure shows a torsion bar OA fixed at O , simply supported at A , and connected to a cantilever AB . The spring rate of the torsion bar is k_T , in newton-meters per radian, and that of the cantilever is k_C , in newtons per meter. What is the overall spring rate based on the deflection y at point B ?



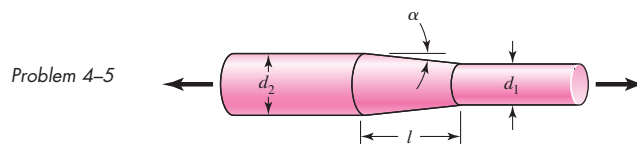
4-3 A torsion-bar spring consists of a prismatic bar, usually of round cross section, that is twisted at one end and held fast at the other to form a stiff spring. An engineer needs a stiffer one than usual and so considers building in both ends and applying the torque somewhere in the central portion of the span, as shown in the figure. If the bar is uniform in diameter, that is, if $d = d_1 = d_2$, investigate how the allowable angle of twist, the largest torque, and the spring rate depend on the location x at which the torque is applied. *Hint:* Consider two springs in parallel.



4-4 An engineer is forced by geometric considerations to apply the torque on the spring of Prob. 4-3 at the location $x = 0.2l$. For a uniform-diameter spring, this would cause the long leg of the span to be underutilized when both legs have the same diameter. If the diameter of the long leg is reduced sufficiently, the shear stress in the two legs can be made equal. How would this change affect the allowable angle of twist, the largest torque, and the spring rate?

4-5 A bar in tension has a circular cross section and includes a conical portion of length l , as shown. The task is to find the spring rate of the entire bar. Equation (4-4) is useful for the outer portions of diameters d_1 and d_2 , but a new relation must be derived for the tapered section. If α is the apex half-angle, as shown, show that the spring rate of the tapered portion of the shaft is

$$k = \frac{EA_1}{l} \left(1 + \frac{2l}{d_1} \tan \alpha \right)$$



4-6 When a hoisting cable is long, the weight of the cable itself contributes to the elongation. If a cable has a weight per unit length of w , a length of l , and a load P attached to the free end, show that the cable elongation is

$$\delta = \frac{Pl}{AE} + \frac{wl^2}{2AE}$$

4-7 Use integration to verify the deflection equation given for the uniformly loaded cantilever beam of appendix Table A-9-3.

4-8 Use integration to verify the deflection equation given for the end moment loaded cantilever beam of appendix Table A-9-4.

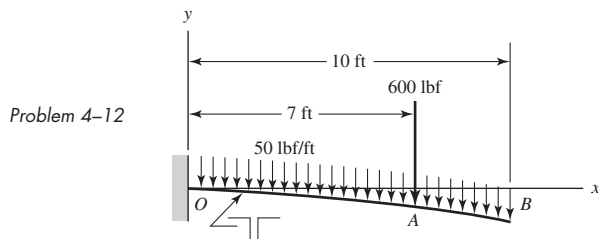
4-9 When an initially straight beam sags under transverse loading, the ends contract because the neutral surface of zero strain neither extends nor contracts. The length of the deflected neutral surface is the same as the original beam length l . Consider a segment of the initially straight beam Δs . After bending, the x -direction component is shorter than Δs , namely, Δx . The contraction is $\Delta s - \Delta x$, and these summed for the entire beam gives the end contraction λ . Show that

$$\lambda \doteq \frac{1}{2} \int_0^l \left(\frac{dy}{dx} \right)^2 dx$$

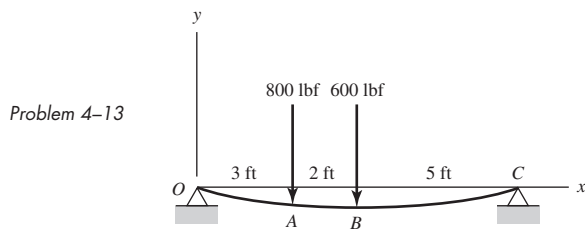
4-10 Using the results of Prob. 4-9, determine the end contraction of the uniformly loaded cantilever beam of appendix Table A-9-3.

4-11 Using the results of Prob. 4-9, determine the end contraction of the uniformly loaded simply-supported beam of appendix Table A-9-7. Assume the left support cannot deflect in the x direction, whereas the right support can.

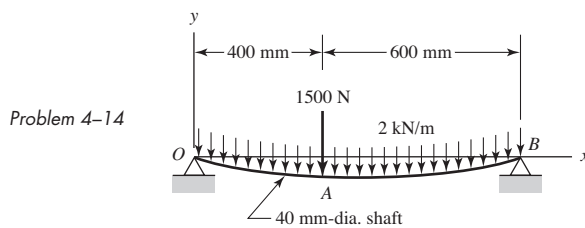
4-12 The figure shows a cantilever consisting of steel angles size $4 \times 4 \times \frac{1}{2}$ in mounted back to back. Using superposition, find the deflection at B and the maximum stress in the beam.



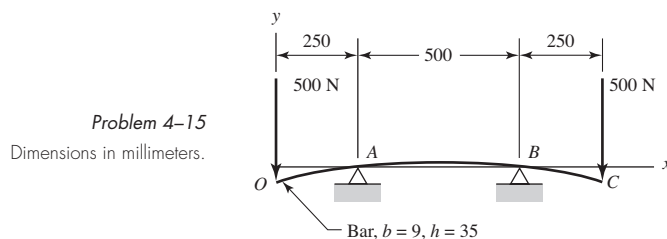
- 4-13** A simply supported beam loaded by two forces is shown in the figure. Select a pair of structural steel channels mounted back to back to support the loads in such a way that the deflection at midspan will not exceed $\frac{1}{16}$ in and the maximum stress will not exceed 6 kpsi. Use superposition.



- 4-14** Using superposition, find the deflection of the steel shaft at A in the figure. Find the deflection at midspan. By what percentage do these two values differ?

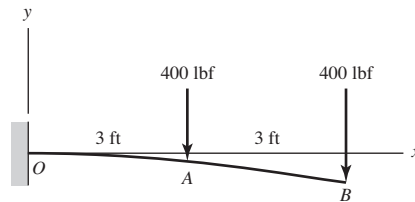


- 4-15** A rectangular steel bar supports the two overhanging loads shown in the figure. Using superposition, find the deflection at the ends and at the center.



- 4-16** Using the formulas in Appendix Table A-9 and superposition, find the deflection of the cantilever at B if $I = 13 \text{ in}^4$ and $E = 30 \text{ Mpsi}$.

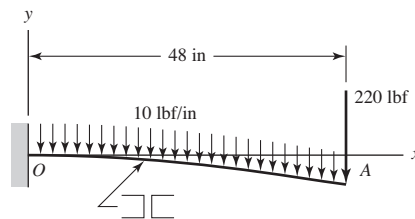
Problem 4–16



4-17

The cantilever shown in the figure consists of two structural-steel channels size 3 in, 5.0 lbf/ft. Using superposition, find the deflection at A.

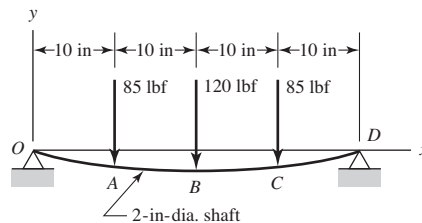
Problem 4–17



4-18

Using superposition, determine the maximum deflection of the beam shown in the figure. The material is carbon steel.

Problem 4–18



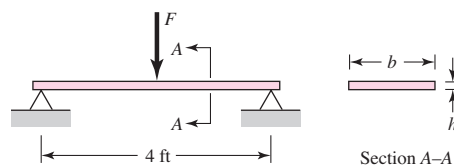
4-19

Illustrated is a rectangular steel bar with simple supports at the ends and loaded by a force F at the middle; the bar is to act as a spring. The ratio of the width to the thickness is to be about $b = 16h$, and the desired spring scale is 2400 lbf/in.

(a) Find a set of cross-section dimensions, using preferred sizes.

(b) What deflection would cause a permanent set in the spring if this is estimated to occur at a normal stress of 90 kpsi?

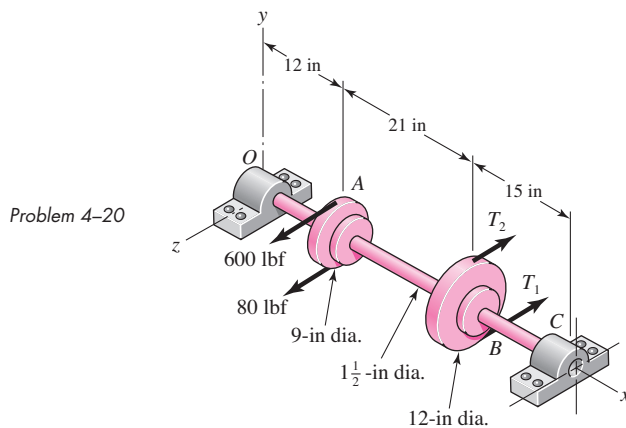
Problem 4–19



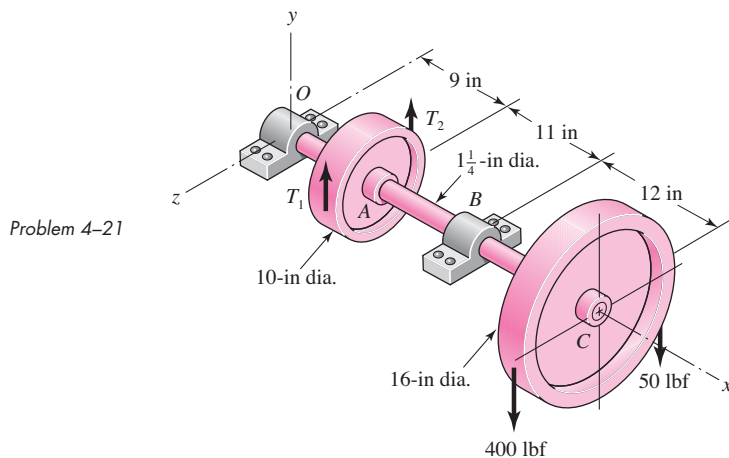
4-20

Illustrated in the figure is a $1\frac{1}{2}$ -in-diameter steel countershaft that supports two pulleys. Pulley A delivers power to a machine causing a tension of 600 lbf in the tight side of the belt and 80 lbf in

the loose side, as indicated. Pulley *B* receives power from a motor. The belt tensions on pulley *B* have the relation $T_1 = 0.125T_2$. Find the deflection of the shaft in the *z* direction at pulleys *A* and *B*. Assume that the bearings constitute simple supports.



- 4–21** The figure shows a steel countershaft that supports two pulleys. Pulley *C* receives power from a motor producing the belt tensions shown. Pulley *A* transmits this power to another machine through the belt tensions T_1 and T_2 such that $T_1 = 8T_2$.



- (a) Find the deflection of the overhanging end of the shaft, assuming simple supports at the bearings.
- (b) If roller bearings are used, the slope of the shaft at the bearings should not exceed 0.06° for good bearing life. What shaft diameter is needed to conform to this requirement? Use $\frac{1}{8}$ -in increments in any iteration you may make. What is the deflection at pulley *C* now?

- 4–22** The structure of a diesel-electric locomotive is essentially a composite beam supporting a deck. Above the deck are mounted the diesel prime mover, generator or alternator, radiators, switch gear, and auxiliaries. Beneath the deck are found fuel and lubricant tanks, air reservoirs, and small auxiliaries. This assembly is supported at bolsters by the trucks that house the

traction motors and brakes. This equipment is distributed as uniformly as possible in the span between the bolsters. In an approximate way, the loading can be viewed as uniform between the bolsters and simply supported. Because the hoods that shield the equipment from the weather have many rectangular access doors, which are mass-produced, it is important that the hood structure be level and plumb and sit on a flat deck. Aesthetics plays a role too. The center sill beam has a second moment of area of $I = 5450 \text{ in}^4$, the bolsters are 36 ft apart, and the deck loading is 5000 lbf/ft.

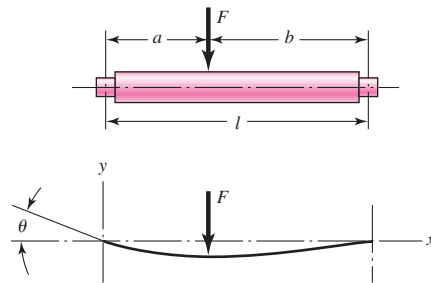
- (a) What is the camber of the curve to which the deck will be built in order that the service-ready locomotive will have a flat deck?
(b) What equation would you give to locate points on the curve of part (a)?

4-23

The designer of a shaft usually has a slope constraint imposed by the bearings used. This limit will be denoted as ξ . If the shaft shown in the figure is to have a uniform diameter d except in the locality of the bearing mounting, it can be approximated as a uniform beam with simple supports. Show that the minimum diameters to meet the slope constraints at the left and right bearings are, respectively,

$$d_L = \left| \frac{32Fb(l^2 - b^2)}{3\pi E l \xi} \right|^{1/4} \quad d_R = \left| \frac{32Fa(l^2 - a^2)}{3\pi E l \xi} \right|^{1/4}$$

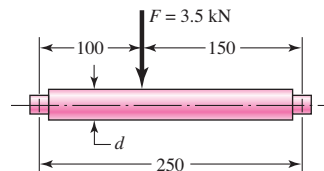
Problem 4-23



4-24

A shaft is to be designed so that it is supported by roller bearings. The basic geometry is shown in the figure. The allowable slope at the bearings is 0.001 mm/mm without bearing life penalty. For a design factor of 1.28, what uniform-diameter shaft will support the 3.5-kN load 100 mm from the left bearing without penalty? Use $E = 207 \text{ GPa}$.

Problem 4-24
Dimensions in millimeters.

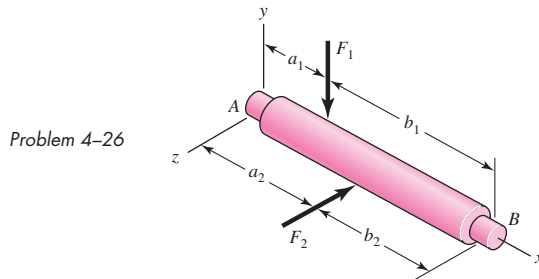


4-25

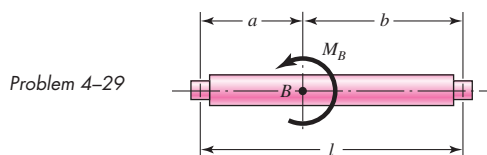
Determine the maximum deflection of the shaft of Prob. 4-24.

4-26

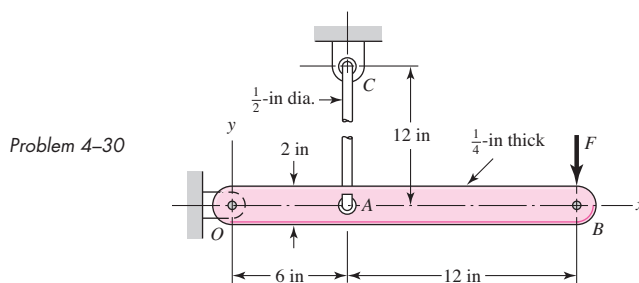
For the shaft shown in the figure, let $a_1 = 4 \text{ in}$, $b_1 = 12 \text{ in}$, $a_2 = 10 \text{ in}$, $F_1 = 100 \text{ lbf}$, $F_2 = 300 \text{ lbf}$, and $E = 30 \text{ Mpsi}$. The shaft is to be sized so that the maximum slope at either bearing A or bearing B does not exceed 0.001 rad. Determine a suitable diameter d .



- 4–27** If the diameter of the beam for Prob. 4–26 is 1.375 in, determine the deflection of the beam at $x = 8$ in.
- 4–28** See Prob. 4–26 and the accompanying figure. The loads and dimensions are $F_1 = 3.5$ kN, $F_2 = 2.7$ kN, $a_1 = 100$ mm, $b_1 = 150$ mm, and $a_2 = 175$ mm. Find the uniform shaft diameter necessary to limit the slope at the bearings to 0.001 rad. Use a design factor of $n_d = 1.5$ and $E = 207$ Gpa.
- 4–29** Shown in the figure is a uniform-diameter shaft with bearing shoulders at the ends; the shaft is subjected to a concentrated moment $M = 1200$ lbf · in. The shaft is of carbon steel and has $a = 5$ in and $l = 9$ in. The slope at the ends must be limited to 0.002 rad. Find a suitable diameter d .

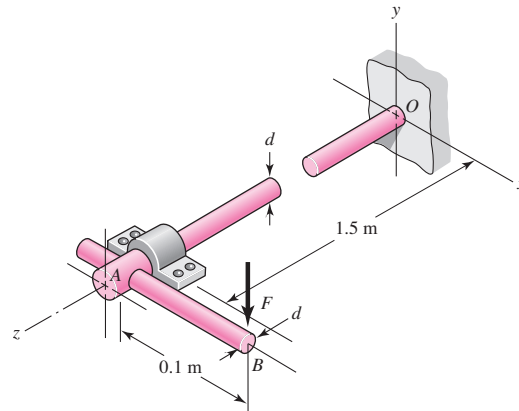


- 4–30** The rectangular member OAB , shown in the figure, is held horizontal by the round hooked bar AC . The modulus of elasticity of both parts is 10 Mpsi. Use superposition to find the deflection at B due to a force $F = 80$ lbf.



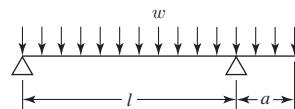
- 4–31** The figure illustrates a torsion-bar spring OA having a diameter $d = 12$ mm. The actuating cantilever AB also has $d = 12$ mm. Both parts are of carbon steel. Use superposition and find the spring rate k corresponding to a force F acting at B .

Problem 4–31



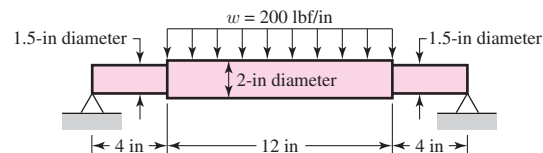
- 4–32** Consider the simply supported beam with an intermediate load in Appendix A–9–6. Determine the deflection equation if the stiffness of the left and right supports are k_1 and k_2 , respectively.
- 4–33** Consider the simply supported beam with a uniform load in Appendix A–9–7. Determine the deflection equation if the stiffness of the left and right supports are k_1 and k_2 , respectively.
- 4–34** Prove that for a uniform-cross-section beam with simple supports at the ends loaded by a single concentrated load, the location of the maximum deflection will never be outside the range of $0.423l \leq x \leq 0.577l$ regardless of the location of the load along the beam. The importance of this is that you can always get a quick estimate of y_{\max} by using $x = l/2$.
- 4–35** Solve Prob. 4–12 using singularity functions. Use statics to determine the reactions.
- 4–36** Solve Prob. 4–13 using singularity functions. Use statics to determine the reactions.
- 4–37** Solve Prob. 4–14 using singularity functions. Use statics to determine the reactions.
- 4–38** Consider the uniformly loaded simply supported beam with an overhang as shown. Use singularity functions to determine the deflection equation of the beam. Use statics to determine the reactions.

Problem 4–38

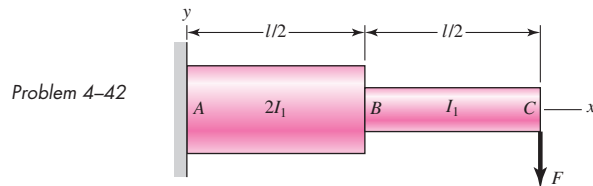


- 4–39** Solve Prob. 4–15 using singularity functions. Since the beam is symmetric, only write the equation for half the beam and use the slope at the beam center as a boundary condition. Use statics to determine the reactions.
- 4–40** Solve Prob. 4–30 using singularity functions. Use statics to determine the reactions.
- 4–41** Determine the deflection equation for the steel beam shown using singularity functions. Since the beam is symmetric, write the equation for only half the beam and use the slope at the beam center as a boundary condition. Use statics to determine the reactions.

Problem 4–41



- 4–42** Determine the deflection equation for the cantilever beam shown using singularity functions. Evaluate the deflections at B and C and compare your results with Example 4–11.



- 4–43** Examine the expression for the deflection of the cantilever beam, end-loaded, shown in Appendix Table A–9–1 for some intermediate point, $x = a$, as

$$y|_{x=a} = \frac{F_1 a^2}{6EI} (a - 3l)$$

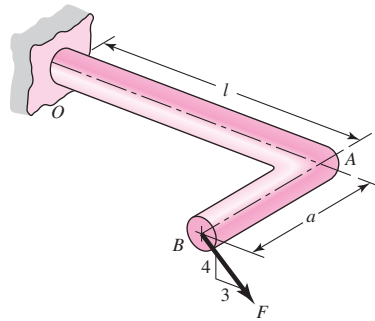
In Table A–9–2, for a cantilever with intermediate load, the deflection at the end is

$$y|_{x=l} = \frac{F_2 a^2}{6EI} (a - 3l)$$

These expressions are remarkably similar and become identical when $F_1 = F_2 = 1$. In other words, the deflection at $x = a$ (station 1) due to a unit load at $x = l$ (station 2) is the same as the deflection at station 2 due to a unit load at station 1. Prove that this is true generally for an elastic body even when the lines of action of the loads are not parallel. This is known as a special case of *Maxwell's reciprocal theorem*. (*Hint*: Consider the potential energy of strain when the body is loaded by two forces in either order of application.)

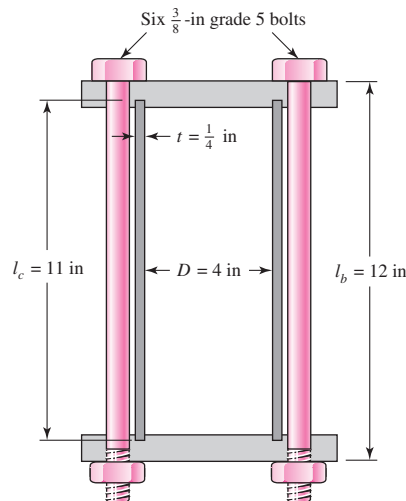
- 4–44** A steel shaft of uniform 2-in diameter has a bearing span l of 23 in and an overhang of 7 in on which a coupling is to be mounted. A gear is to be attached 9 in to the right of the left bearing and will carry a radial load of 400 lbf. We require an estimate of the bending deflection at the coupling. Appendix Table A–9–6 is available, but we can't be sure of how to expand the equation to predict the deflection at the coupling.
- Show how Appendix Table A–9–10 and Maxwell's theorem (see Prob. 4–43) can be used to obtain the needed estimate.
 - Check your work by finding the slope at the right bearing and extending it to the coupling location.
- 4–45** Use Castigliano's theorem to verify the maximum deflection for the uniformly loaded beam of Appendix Table A–9–7. Neglect shear.
- 4–46** Solve Prob. 4–17 using Castigliano's theorem. *Hint*: Write the moment equation using a position variable positive to the left starting at the right end of the beam.
- 4–47** Solve Prob. 4–30 using Castigliano's theorem.
- 4–48** Solve Prob. 4–31 using Castigliano's theorem.
- 4–49** Determine the deflection at midspan for the beam of Prob. 4–41 using Castigliano's theorem.

- 4–50** Using Castigliano's theorem, determine the deflection of point B in the direction of the force F for the bar shown. The solid bar has a uniform diameter, d . Neglect bending shear.



Problem 4–50

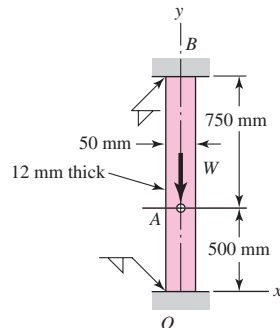
- 4–51** A cable is made using a 16-gauge (0.0625-in) steel wire and three strands of 12-gauge (0.0801-in) copper wire. Find the stress in each wire if the cable is subjected to a tension of 250 lbf.
- 4–52** The figure shows a steel pressure cylinder of diameter 4 in which uses six SAE grade 5 steel bolts having a grip of 12 in. These bolts have a proof strength (see Chap. 8) of 85 kpsi for this size of bolt. Suppose the bolts are tightened to 90 percent of this strength in accordance with some recommendations.
- (a) Find the tensile stress in the bolts and the compressive stress in the cylinder walls.
- (b) Repeat part (a), but assume now that a fluid under a pressure of 600 psi is introduced into the cylinder.



Problem 4–52

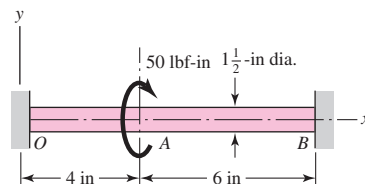
- 4–53** A torsion bar of length L consists of a round core of stiffness $(GJ)_c$ and a shell of stiffness $(GJ)_s$. If a torque T is applied to this composite bar, what percentage of the total torque is carried by the shell?
- 4–54** A rectangular aluminum bar 12 mm thick and 50 mm wide is welded to fixed supports at the ends, and the bar supports a load $W = 3.5$ kN, acting through a pin as shown. Find the reactions at the supports.

Problem 4–54



- 4–55** The steel shaft shown in the figure is subjected to a torque of 50 lbf-in applied at point A. Find the torque reactions at O and B.

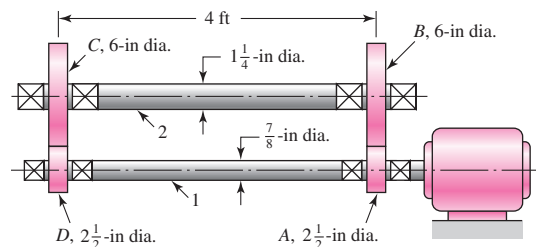
Problem 4–55



- 4–56** Repeat Prob. 4–55 with the diameters of section OA being 1.5 in and section AB being 1.75 in.

- 4–57** In testing the wear life of gear teeth, the gears are assembled by using a pretorsion. In this way, a large torque can exist even though the power input to the tester is small. The arrangement shown in the figure uses this principle. Note the symbol used to indicate the location of the shaft bearings used in the figure. Gears A, B, and C are assembled first, and then gear C is held fixed. Gear D is assembled and meshed with gear C by twisting it through an angle of 4° to provide the pretorsion. Find the maximum shear stress in each shaft resulting from this preload.

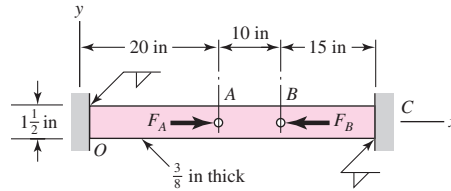
Problem 4–57



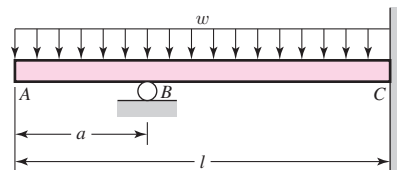
- 4–58** The figure shows a $\frac{3}{8}$ - by $1\frac{1}{2}$ -in rectangular steel bar welded to fixed supports at each end. The bar is axially loaded by the forces $F_A = 10$ kip and $F_B = 5$ kip acting on pins at A and B. Assuming that the bar will not buckle laterally, find the reactions at the fixed supports. Use procedure 1 from Sec. 4–10.

- 4–59** For the beam shown, determine the support reactions using superposition and procedure 1 from Sec. 4–10.

Problem 4–58



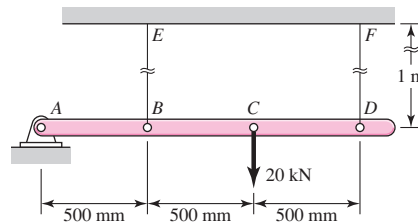
Problem 4–59



4–60 Solve Prob. 4–59 using Castigliano's theorem and procedure 1 from Sec. 4–10.

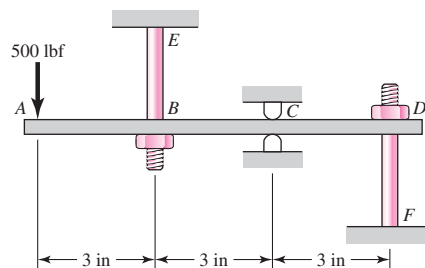
4–61 The steel beam $ABCD$ shown is simply supported at A and supported at B and D by steel cables, each having an effective diameter of 12 mm. The second area moment of the beam is $I = 8(10^5) \text{ mm}^4$. A force of 20 kN is applied at point C . Using procedure 2 of Sec. 4–10 determine the stresses in the cables and the deflections of B , C , and D . For steel, let $E = 209 \text{ GPa}$.

Problem 4–61



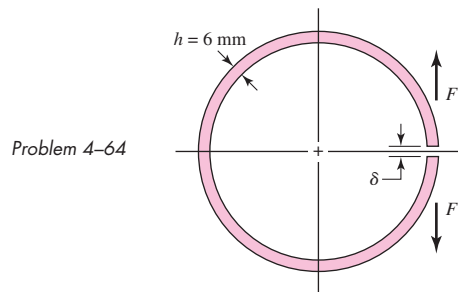
4–62 The steel beam $ABCD$ shown is supported at C as shown and supported at B and D by steel bolts each having a diameter of $\frac{5}{16} \text{ in}$. The lengths of BE and DF are 2 and 2.5 in, respectively. The beam has a second area moment of 0.050 in^4 . Prior to loading, the nuts are just in contact with the horizontal beam. A force of 500 lbf is then applied at point A . Using procedure 2 of Sec. 4–10, determine the stresses in the bolts and the deflections of points A , B , and D . For steel, let $E = 30 \text{ Mpsi}$.

Problem 4–62

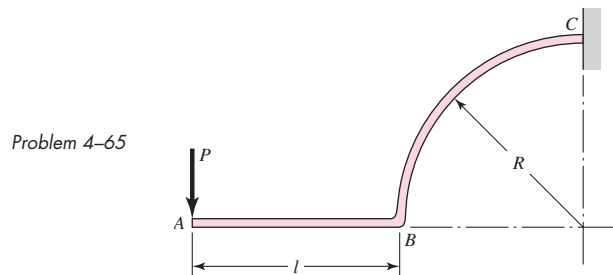


4–63 The horizontal deflection of the right end of the curved bar of Fig. 4–12 is given by Eq. (4–35) for $R/h > 10$. For the same conditions, determine the vertical deflection.

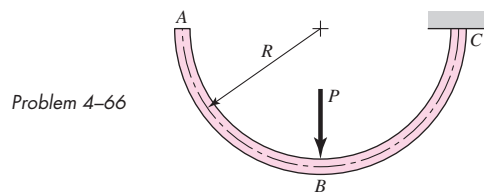
- 4–64** A cast-iron piston ring has a mean diameter of 81 mm, a radial height $h = 6$ mm, and a thickness $b = 4$ mm. The ring is assembled using an expansion tool that separates the split ends a distance δ by applying a force F as shown. Use Castigliano's theorem and determine the deflection δ as a function of F . Use $E = 131$ GPa and assume Eq. (4–28) applies.



- 4–65** For the wire form shown use Castigliano's method to determine the vertical deflection of point A. Consider bending only and assume Eq. (4–28) applies for the curved part.

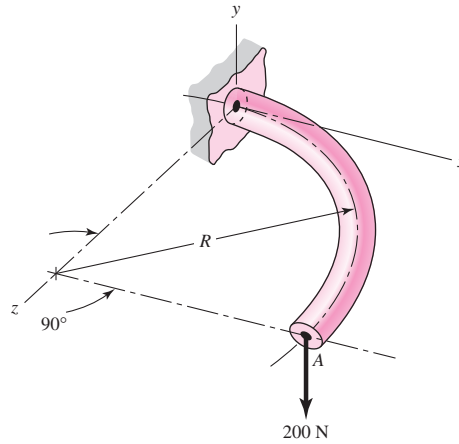


- 4–66** For the wire form shown determine the vertical deflections of points A and B. Consider bending only and assume Eq. (4–28) applies.



- 4–67** For the wire form shown, determine the deflection of point A in the y direction. Assume $R/h > 10$ and consider the effects of bending and torsion only. The wire is steel with $E = 200$ GPa, $\nu = 0.29$, and has a diameter of 5 mm. Before application of the 200-N force the wire form is in the xz plane where the radius R is 100 mm.

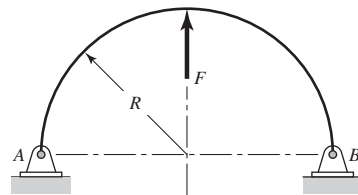
Problem 4–67



4–68

For the wire form shown, determine (a) the reactions at points A and B , (b) how the bending moment varies along the wire, and (c) the deflection of the load F . Assume that the entire energy is described by Eq. (4–28).

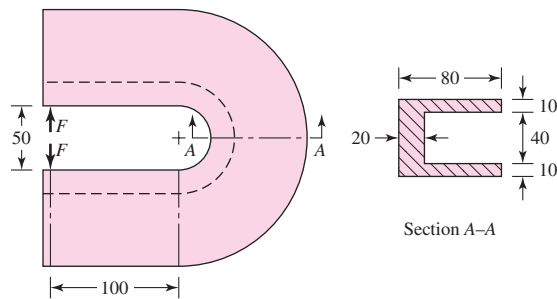
Problem 4–68



4–69

For the curved beam shown, $F = 30$ kN. The material is steel with $E = 207$ GPa and $G = 79$ GPa. Determine the relative deflection of the applied forces.

Problem 4–69



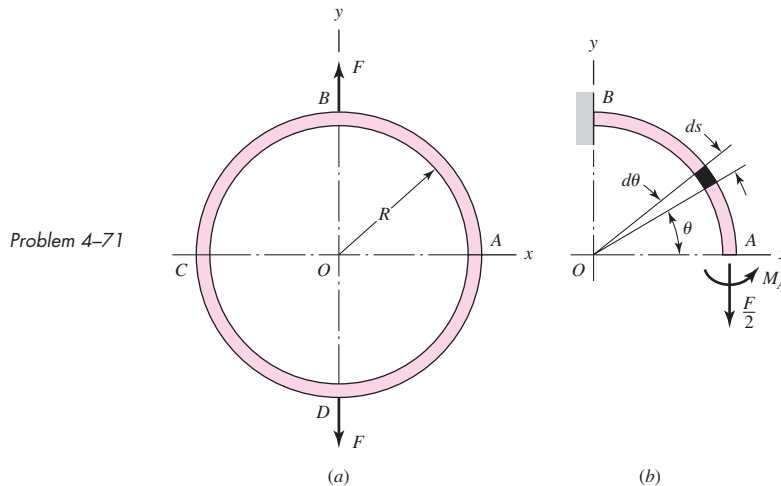
(All dimensions in millimeters.)

4–70

Solve Prob. 4–63 using Eq. (4–32).

4–71

A thin ring is loaded by two equal and opposite forces F in part a of the figure. A free-body diagram of one quadrant is shown in part b . This is a statically indeterminate problem, because the moment M_A cannot be found by statics. We wish to find the maximum bending moment in the ring due to the forces F . Assume that the radius of the ring is large so that Eq. (4–28) can be used.



4-72 Find the increase in the diameter of the ring of Prob. 4-71 due to the forces F and along the y axis.

4-73 A round tubular column has outside and inside diameters of D and d , respectively, and a diametral ratio of $K = d/D$. Show that buckling will occur when the outside diameter is

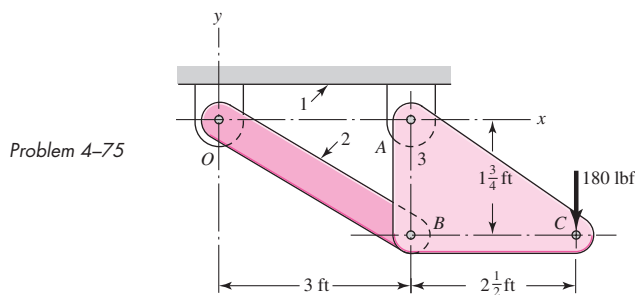
$$D = \left[\frac{64 P_{cr} l^2}{\pi^3 C E (1 - K^4)} \right]^{1/4}$$

4-74 For the conditions of Prob. 4-73, show that buckling according to the parabolic formula will occur when the outside diameter is

$$D = 2 \left[\frac{P_{cr}}{\pi S_y (1 - K^2)} + \frac{S_y l^2}{\pi^2 C E (1 + K^2)} \right]^{1/2}$$

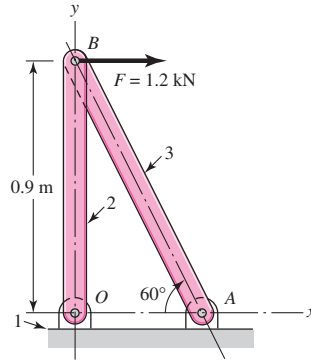
4-75 Link 2, shown in the figure, is 1 in wide, has $\frac{1}{2}$ -in-diameter bearings at the ends, and is cut from low-carbon steel bar stock having a minimum yield strength of 24 kpsi. The end-condition constants are $C = 1$ and $C = 1.2$ for buckling in and out of the plane of the drawing, respectively.

- (a) Using a design factor $n_d = 5$, find a suitable thickness for the link.
 (b) Are the bearing stresses at O and B of any significance?



4-76 Link 3, shown schematically in the figure, acts as a brace to support the 1.2-kN load. For buckling in the plane of the figure, the link may be regarded as pinned at both ends. For out-of-plane buckling, the ends are fixed. Select a suitable material and a method of manufacture, such as forging, casting, stamping, or machining, for casual applications of the brace in oil-field machinery. Specify the dimensions of the cross section as well as the ends so as to obtain a strong, safe, well-made, and economical brace.

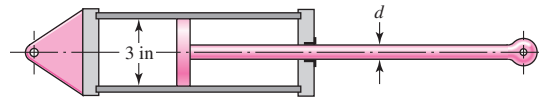
Problem 4–76



4–77

The hydraulic cylinder shown in the figure has a 3-in bore and is to operate at a pressure of 800 psi. With the clevis mount shown, the piston rod should be sized as a column with both ends rounded for any plane of buckling. The rod is to be made of forged AISI 1030 steel without further heat treatment.

Problem 4–77

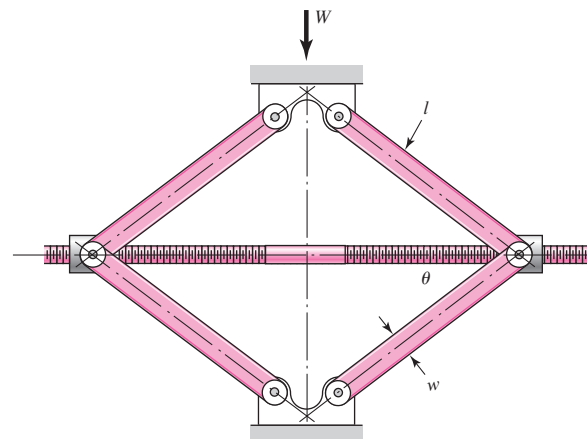


- (a) Use a design factor $n_d = 3$ and select a preferred size for the rod diameter if the column length is 60 in.
- (b) Repeat part (a) but for a column length of 18 in.
- (c) What factor of safety actually results for each of the cases above?

4–78

The figure shows a schematic drawing of a vehicular jack that is to be designed to support a maximum mass of 400 kg based on the use of a design factor $n_d = 2.50$. The opposite-handed threads on the two ends of the screw are cut to allow the link angle θ to vary from 15° to 70° . The links are to be machined from AISI 1020 hot-rolled steel bars with a minimum yield strength of 380 MPa. Each of the four links is to consist of two bars, one on each side of the central bearings. The bars are to be 300 mm long and have a bar width of 25 mm. The pinned ends are to be designed to secure an end-condition constant of at least $C = 1.4$ for out-of-plane buckling. Find a suitable preferred thickness and the resulting factor of safety for this thickness.

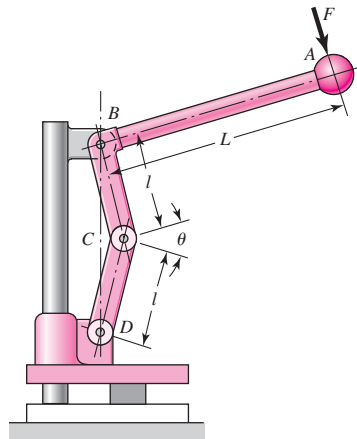
Problem 4–78



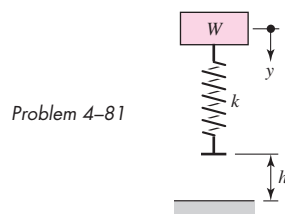
4-79 If drawn, a figure for this problem would resemble that for Prob. 4-52. A strut that is a standard hollow right circular cylinder has an outside diameter of 4 in and a wall thickness of $\frac{3}{8}$ in and is compressed between two circular end plates held by four bolts equally spaced on a bolt circle of 5.68-in diameter. All four bolts are hand-tightened, and then bolt *A* is tightened to a tension of 2000 lbf and bolt *C*, diagonally opposite, is tightened to a tension of 10 000 lbf. The strut axis of symmetry is coincident with the center of the bolt circles. Find the maximum compressive load, the eccentricity of loading, and the largest compressive stress in the strut.

4-80 Design link *CD* of the hand-operated toggle press shown in the figure. Specify the cross-section dimensions, the bearing size and rod-end dimensions, the material, and the method of processing.

Problem 4-80
 $L = 12$ in, $l = 4$ in, $\theta_{\min} = 0^\circ$.

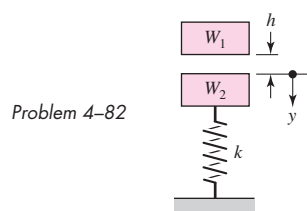


4-81 Find expressions for the maximum values of the spring force and deflection y of the impact system shown in the figure. Can you think of a realistic application for this model?



Problem 4-81

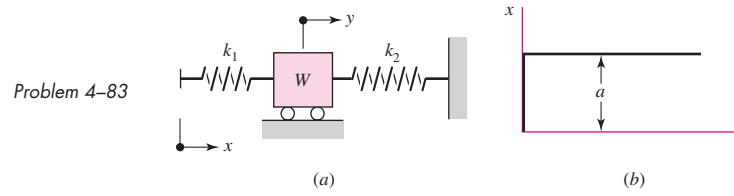
4-82 As shown in the figure, the weight W_1 strikes W_2 from a height h . Find the maximum values of the spring force and the deflection of W_2 . Name an actual system for which this model might be used.



Problem 4-82

4-83

Part *a* of the figure shows a weight W mounted between two springs. If the free end of spring k_1 is suddenly displaced through the distance $x = a$, as shown in part *b*, what would be the maximum displacement y of the weight?



PART**2****Failure Prevention**

5

Failures Resulting from Static Loading

Chapter Outline

- 5-1** Static Strength **208**
- 5-2** Stress Concentration **209**
- 5-3** Failure Theories **211**
- 5-4** Maximum-Shear-Stress Theory for Ductile Materials **211**
- 5-5** Distortion-Energy Theory for Ductile Materials **213**
- 5-6** Coulomb-Mohr Theory for Ductile Materials **219**
- 5-7** Failure of Ductile Materials Summary **222**
- 5-8** Maximum-Normal-Stress Theory for Brittle Materials **226**
- 5-9** Modifications of the Mohr Theory for Brittle Materials **227**
- 5-10** Failure of Brittle Materials Summary **229**
- 5-11** Selection of Failure Criteria **230**
- 5-12** Introduction to Fracture Mechanics **231**
- 5-13** Stochastic Analysis **240**
- 5-14** Important Design Equations **246**

In Chap. 1 we learned that *strength is a property or characteristic of a mechanical element*. This property results from the material identity, the treatment and processing incidental to creating its geometry, and the loading, and it is at the controlling or critical location.

In addition to considering the strength of a single part, we must be cognizant that the strengths of the mass-produced parts will all be somewhat different from the others in the collection or ensemble because of variations in dimensions, machining, forming, and composition. Descriptors of strength are necessarily statistical in nature, involving parameters such as mean, standard deviations, and distributional identification.

A *static load* is a stationary force or couple applied to a member. To be stationary, the force or couple must be unchanging in magnitude, point or points of application, and direction. A static load can produce axial tension or compression, a shear load, a bending load, a torsional load, or any combination of these. To be considered static, the load cannot change in any manner.


In this chapter we consider the relations between strength and static loading in order to make the decisions concerning material and its treatment, fabrication, and geometry for satisfying the requirements of functionality, safety, reliability, competitiveness, usability, manufacturability, and marketability. How far we go down this list is related to the scope of the examples.

“Failure” is the first word in the chapter title. Failure can mean a part has separated into two or more pieces; has become permanently distorted, thus ruining its geometry; has had its reliability downgraded; or has had its function compromised, whatever the reason. A designer speaking of failure can mean any or all of these possibilities. In this chapter our attention is focused on the predictability of permanent distortion or separation. In strength-sensitive situations the designer must separate mean stress and mean strength at the critical location sufficiently to accomplish his or her purposes.


Figures 5–1 to 5–5 are photographs of several failed parts. The photographs exemplify the need of the designer to be well-versed in failure prevention. Toward this end we shall consider one-, two-, and three-dimensional stress states, with and without stress concentrations, for both ductile and brittle materials.

Figure 5-1

- (a) Failure of a truck drive-shaft spline due to corrosion fatigue. Note that it was necessary to use clear tape to hold the pieces in place.
(b) Direct end view of failure.



(a)



(b)

Figure 5-2

Impact failure of a lawn-mower blade driver hub. The blade impacted a surveying pipe marker.

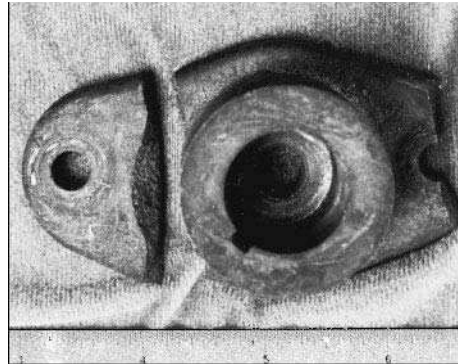


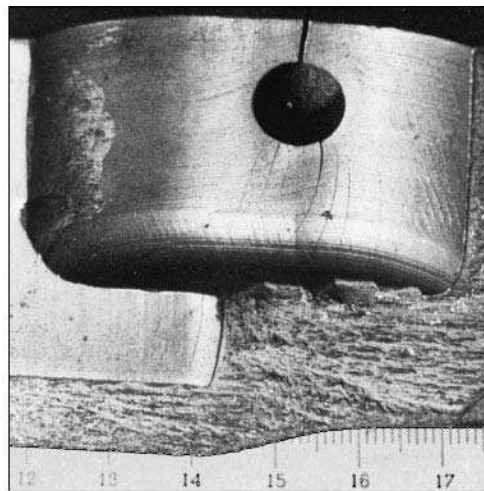


Figure 5-3

Failure of an overhead-pulley retaining bolt on a weightlifting machine. A manufacturing error caused a gap that forced the bolt to take the entire moment load.



(a)




(b)

Figure 5-4

Chain test fixture that failed in one cycle. To alleviate complaints of excessive wear, the manufacturer decided to case-harden the material. (a) Two halves showing fracture; this is an excellent example of brittle fracture initiated by stress concentration. (b) Enlarged view of one portion to show cracks induced by stress concentration at the support-pin holes.

Figure 5-5

Valve-spring failure caused by spring surge in an oversped engine. The fractures exhibit the classic 45° shear failure.



5-1 Static Strength

Ideally, in designing any machine element, the engineer should have available the results of a great many strength tests of the particular material chosen. These tests should be made on specimens having the same heat treatment, surface finish, and size as the element the engineer proposes to design; and the tests should be made under exactly the same loading conditions as the part will experience in service. This means that if the part is to experience a bending load, it should be tested with a bending load. If it is to be subjected to combined bending and torsion, it should be tested under combined bending and torsion. If it is made of heat-treated AISI 1040 steel drawn at 500°C with a ground finish, the specimens tested should be of the same material prepared in the same manner. Such tests will provide very useful and precise information. Whenever such data are available for design purposes, the engineer can be assured of doing the best possible job of engineering.

The cost of gathering such extensive data prior to design is justified if failure of the part may endanger human life or if the part is manufactured in sufficiently large quantities. Refrigerators and other appliances, for example, have very good reliabilities because the parts are made in such large quantities that they can be thoroughly tested in advance of manufacture. The cost of making these tests is very low when it is divided by the total number of parts manufactured.

You can now appreciate the following four design categories:

- 1 Failure of the part would endanger human life, or the part is made in extremely large quantities; consequently, an elaborate testing program is justified during design.
- 2 The part is made in large enough quantities that a moderate series of tests is feasible.
- 3 The part is made in such small quantities that testing is not justified at all; or the design must be completed so rapidly that there is not enough time for testing.

- 4 The part has already been designed, manufactured, and tested and found to be unsatisfactory. Analysis is required to understand why the part is unsatisfactory and what to do to improve it.

More often than not it is necessary to design using only published values of yield strength, ultimate strength, percentage reduction in area, and percentage elongation, such as those listed in Appendix A. How can one use such meager data to design against both static and dynamic loads, two- and three-dimensional stress states, high and low temperatures, and very large and very small parts? These and similar questions will be addressed in this chapter and those to follow, but think how much better it would be to have data available that duplicate the actual design situation.

5-2 Stress Concentration

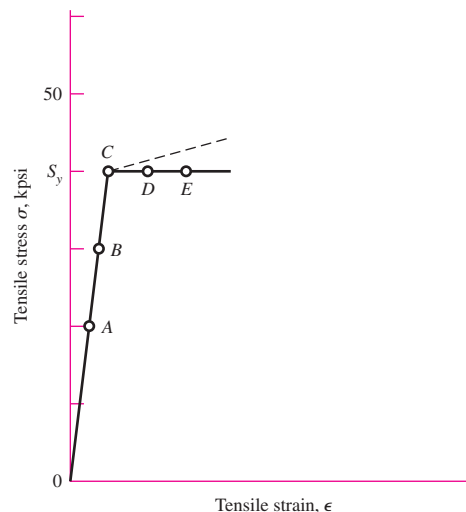
Stress concentration (see Sec. 3-13) is a highly localized effect. In some instances it may be due to a surface scratch. If the material is ductile and the load static, the design load may cause yielding in the critical location in the notch. This yielding can involve strain strengthening of the material and an increase in yield strength at the small critical notch location. Since the loads are static and the material is ductile, that part can carry the loads satisfactorily with no general yielding. In these cases the designer sets the geometric (theoretical) stress concentration factor K_t to unity.

The rationale can be expressed as follows. The worst-case scenario is that of an idealized non-strain-strengthening material shown in Fig. 5-6. The stress-strain curve rises linearly to the yield strength S_y , then proceeds at constant stress, which is equal to S_y . Consider a filleted rectangular bar as depicted in Fig. A-15-5, where the cross-section area of the small shank is 1 in^2 . If the material is ductile, with a yield point of 40 kpsi, and the theoretical stress-concentration factor (SCF) K_t is 2,

- A load of 20 kip induces a tensile stress of 20 kpsi in the shank as depicted at point A in Fig. 5-6. At the critical location in the fillet the stress is 40 kpsi, and the SCF is $K = \sigma_{\max}/\sigma_{\text{nom}} = 40/20 = 2$.

Figure 5-6

An idealized stress-strain curve. The dashed line depicts a strain-strengthening material.



- A load of 30 kip induces a tensile stress of 30 kpsi in the shank at point *B*. The fillet stress is still 40 kpsi (point *D*), and the SCF $K = \sigma_{\max}/\sigma_{\text{nom}} = S_y/\sigma = 40/30 = 1.33$.
- At a load of 40 kip the induced tensile stress (point *C*) is 40 kpsi in the shank. At the critical location in the fillet, the stress (at point *E*) is 40 kpsi. The SCF $K = \sigma_{\max}/\sigma_{\text{nom}} = S_y/\sigma = 40/40 = 1$.

For materials that strain-strengthen, the critical location in the notch has a higher S_y . The shank area is at a stress level a little below 40 kpsi, is carrying load, and is very near its failure-by-general-yielding condition. This is the reason designers do not apply K_t in *static loading* of a *ductile material* loaded elastically, instead setting $K_t = 1$.

When using this rule for ductile materials with static loads, be careful to assure yourself that the material is not susceptible to brittle fracture (see Sec. 5–12) in the environment of use. The usual definition of geometric (theoretical) stress-concentration factor for normal stress K_t and shear stress K_{ts} is

$$\sigma_{\max} = K_t \sigma_{\text{nom}} \quad (a)$$

$$\tau_{\max} = K_{ts} \tau_{\text{nom}} \quad (b)$$

Since your attention is on the stress-concentration factor, and the definition of σ_{nom} or τ_{nom} is given in the graph caption or from a computer program, be sure the value of nominal stress is appropriate for the section carrying the load.

Brittle materials do not exhibit a plastic range. A brittle material “feels” the stress concentration factor K_t or K_{ts} , which is applied by using Eq. (a) or (b).

An exception to this rule is a brittle material that inherently contains microdiscontinuity stress concentration, worse than the macrodiscontinuity that the designer has in mind. Sand molding introduces sand particles, air, and water vapor bubbles. The grain structure of cast iron contains graphite flakes (with little strength), which are literally cracks introduced during the solidification process. When a tensile test on a cast iron is performed, the strength reported in the literature *includes* this stress concentration. In such cases K_t or K_{ts} need not be applied.

An important source of stress-concentration factors is R. E. Peterson, who compiled them from his own work and that of others.¹ Peterson developed the style of presentation in which the stress-concentration factor K_t is multiplied by the nominal stress σ_{nom} to estimate the magnitude of the largest stress in the locality. His approximations were based on photoelastic studies of two-dimensional strips (Hartman and Levan, 1951; Wilson and White, 1973), with some limited data from three-dimensional photoelastic tests of Hartman and Levan. A contoured graph was included in the presentation of each case. Filleted shafts in tension were based on two-dimensional strips. Table A–15 provides many charts for the theoretical stress-concentration factors for several fundamental load conditions and geometry. Additional charts are also available from Peterson.²

Finite element analysis (FEA) can also be applied to obtain stress-concentration factors. Improvements on K_t and K_{ts} for filleted shafts were reported by Tipton, Sorem, and Rolovic.³

¹R. E. Peterson, “Design Factors for Stress Concentration,” *Machine Design*, vol. 23, no. 2, February 1951; no. 3, March 1951; no. 5, May 1951; no. 6, June 1951; no. 7, July 1951.

²Walter D. Pilkey, *Peterson’s Stress Concentration Factors*, 2nd ed, John Wiley & Sons, New York, 1997.

³S. M. Tipton, J. R. Sorem Jr., and R. D. Rolovic, “Updated Stress-Concentration Factors for Filleted Shafts in Bending and Tension,” *Trans. ASME, Journal of Mechanical Design*, vol. 118, September 1996, pp. 321–327.

5–3 Failure Theories

Section 5–1 illustrated some ways that loss of function is manifested. Events such as distortion, permanent set, cracking, and rupturing are among the ways that a machine element fails. Testing machines appeared in the 1700s, and specimens were pulled, bent, and twisted in simple loading processes.

If the failure mechanism is simple, then simple tests can give clues. Just what is simple? The tension test is uniaxial (that's simple) and elongations are largest in the axial direction, so strains can be measured and stresses inferred up to "failure." Just what is important: a critical stress, a critical strain, a critical energy? In the next several sections, we shall show failure theories that have helped answer some of these questions.

Unfortunately, there is no universal theory of failure for the general case of material properties and stress state. Instead, over the years several hypotheses have been formulated and tested, leading to today's accepted practices. Being accepted, we will characterize these "practices" as *theories* as most designers do.

Structural metal behavior is typically classified as being ductile or brittle, although under special situations, a material normally considered ductile can fail in a brittle manner (see Sec. 5–12). Ductile materials are normally classified such that $\epsilon_f \geq 0.05$ and have an identifiable yield strength that is often the same in compression as in tension ($S_{yt} = S_{yc} = S_y$). Brittle materials, $\epsilon_f < 0.05$, do not exhibit an identifiable yield strength, and are typically classified by ultimate tensile and compressive strengths, S_{ut} and S_{uc} , respectively (where S_{uc} is given as a positive quantity). The generally accepted theories are:

Ductile materials (yield criteria)

- Maximum shear stress (MSS), Sec. 5–4
- Distortion energy (DE), Sec. 5–5
- Ductile Coulomb-Mohr (DCM), Sec. 5–6

Brittle materials (fracture criteria)

- Maximum normal stress (MNS), Sec. 5–8
- Brittle Coulomb-Mohr (BCM), Sec. 5–9
- Modified Mohr (MM), Sec. 5–9

It would be inviting if we had one universally accepted theory for each material type, but for one reason or another, they are all used. Later, we will provide rationales for selecting a particular theory. First, we will describe the bases of these theories and apply them to some examples.

5–4 Maximum-Shear-Stress Theory for Ductile Materials

The *maximum-shear-stress theory* predicts that *yielding begins whenever the maximum shear stress in any element equals or exceeds the maximum shear stress in a tension-test specimen of the same material when that specimen begins to yield.* The MSS theory is also referred to as the *Tresca* or *Guest theory*.

Many theories are postulated on the basis of the consequences seen from tensile tests. As a strip of a ductile material is subjected to tension, slip lines (called *Lüder lines*) form at approximately 45° with the axis of the strip. These slip lines are the

beginning of yield, and when loaded to fracture, fracture lines are also seen at angles approximately 45° with the axis of tension. Since the shear stress is maximum at 45° from the axis of tension, it makes sense to think that this is the mechanism of failure. It will be shown in the next section, that there is a little more going on than this. However, it turns out the MSS theory is an acceptable but conservative predictor of failure; and since engineers are conservative by nature, it is quite often used.

Recall that for simple tensile stress, $\sigma = P/A$, and the maximum shear stress occurs on a surface 45° from the tensile surface with a magnitude of $\tau_{\max} = \sigma/2$. So the maximum shear stress at yield is $\tau_{\max} = S_y/2$. For a general state of stress, three principal stresses can be determined and ordered such that $\sigma_1 \geq \sigma_2 \geq \sigma_3$. The maximum shear stress is then $\tau_{\max} = (\sigma_1 - \sigma_3)/2$ (see Fig. 3–12). Thus, for a general state of stress, the maximum-shear-stress theory predicts yielding when

$$\tau_{\max} = \frac{\sigma_1 - \sigma_3}{2} \geq \frac{S_y}{2} \quad \text{or} \quad \sigma_1 - \sigma_3 \geq S_y \quad (5-1)$$

Note that this implies that the yield strength in shear is given by

$$S_{s_y} = 0.5S_y \quad (5-2)$$

which, as we will see later is about 15 percent low (conservative).

For design purposes, Eq. (5–1) can be modified to incorporate a factor of safety, n . Thus,

$$\tau_{\max} = \frac{S_y}{2n} \quad \text{or} \quad \sigma_1 - \sigma_3 = \frac{S_y}{n} \quad (5-3)$$

Plane stress problems are very common where one of the principal stresses is zero, and the other two, σ_A and σ_B , are determined from Eq. (3–13). Assuming that $\sigma_A \geq \sigma_B$, there are three cases to consider in using Eq. (5–1) for plane stress:

Case 1: $\sigma_A \geq \sigma_B \geq 0$. For this case, $\sigma_1 = \sigma_A$ and $\sigma_3 = 0$. Equation (5–1) reduces to a yield condition of

$$\sigma_A \geq S_y \quad (5-4)$$

Case 2: $\sigma_A \geq 0 \geq \sigma_B$. Here, $\sigma_1 = \sigma_A$ and $\sigma_3 = \sigma_B$, and Eq. (5–1) becomes

$$\sigma_A - \sigma_B \geq S_y \quad (5-5)$$

Case 3: $0 \geq \sigma_A \geq \sigma_B$. For this case, $\sigma_1 = 0$ and $\sigma_3 = \sigma_B$, and Eq. (5–1) gives

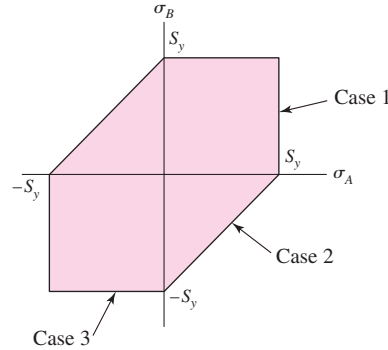
$$\sigma_B \leq -S_y \quad (5-6)$$

Equations (5–4) to (5–6) are represented in Fig. 5–7 by the three lines indicated in the σ_A, σ_B plane. The remaining unmarked lines are cases for $\sigma_B \geq \sigma_A$, which are not normally used. Equations (5–4) to (5–6) can also be converted to design equations by substituting equality for the equal to or greater sign and dividing S_y by n .

Note that the first part of Eq. (5-3), $\tau_{\max} = S_y/2n$, is sufficient for design purposes provided the designer is careful in determining τ_{\max} . For plane stress, Eq. (3–14) *does not always predict* τ_{\max} . However, consider the special case when one normal stress is zero in the plane, say σ_x and τ_{xy} have values and $\sigma_y = 0$. It can be easily shown that this is a Case 2 problem, and the shear stress determined by Eq. (3–14) *is* τ_{\max} . Shaft design problems typically fall into this category where a normal stress exists from bending and/or axial loading, and a shear stress arises from torsion.

Figure 5-7

The maximum-shear-stress (MSS) theory for plane stress, where σ_A and σ_B are the two nonzero principal stresses.



5-5 Distortion-Energy Theory for Ductile Materials

The *distortion-energy theory* predicts that *yielding occurs when the distortion strain energy per unit volume reaches or exceeds the distortion strain energy per unit volume for yield in simple tension or compression of the same material.*

The distortion-energy (DE) theory originated from the observation that ductile materials stressed hydrostatically exhibited yield strengths greatly in excess of the values given by the simple tension test. Therefore it was postulated that yielding was not a simple tensile or compressive phenomenon at all, but, rather, that it was related somehow to the angular distortion of the stressed element. To develop the theory, note, in Fig. 5-8a, the unit volume subjected to any three-dimensional stress state designated by the stresses σ_1 , σ_2 , and σ_3 . The stress state shown in Fig. 5-8b is one of hydrostatic tension due to the stresses σ_{av} acting in each of the same principal directions as in Fig. 5-8a. The formula for σ_{av} is simply

$$\sigma_{av} = \frac{\sigma_1 + \sigma_2 + \sigma_3}{3} \quad (a)$$

Thus the element in Fig. 5-8b undergoes pure volume change, that is, no angular distortion. If we regard σ_{av} as a component of σ_1 , σ_2 , and σ_3 , then this component can be

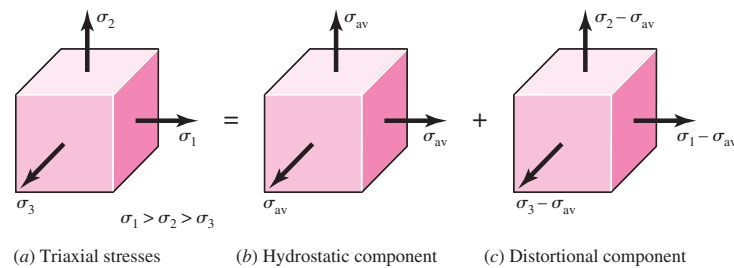


Figure 5-8

(a) Element with triaxial stresses; this element undergoes both volume change and angular distortion. (b) Element under hydrostatic tension undergoes only volume change. (c) Element has angular distortion without volume change.

subtracted from them, resulting in the stress state shown in Fig. 5–8c. This element is subjected to pure angular distortion, that is, no volume change.

The strain energy per unit volume for simple tension is $u = \frac{1}{2}\epsilon\sigma$. For the element of Fig. 5–8a the strain energy per unit volume is $u = \frac{1}{2}[\epsilon_1\sigma_1 + \epsilon_2\sigma_2 + \epsilon_3\sigma_3]$. Substituting Eq. (3–19) for the principal strains gives

$$u = \frac{1}{2E}[\sigma_1^2 + \sigma_2^2 + \sigma_3^2 - 2\nu(\sigma_1\sigma_2 + \sigma_2\sigma_3 + \sigma_3\sigma_1)] \quad (b)$$

The strain energy for producing only volume change u_v can be obtained by substituting σ_{av} for σ_1 , σ_2 , and σ_3 in Eq. (b). The result is

$$u_v = \frac{3\sigma_{av}^2}{2E}(1 - 2\nu) \quad (c)$$

If we now substitute the square of Eq. (a) in Eq. (c) and simplify the expression, we get

$$u_v = \frac{1 - 2\nu}{6E}(\sigma_1^2 + \sigma_2^2 + \sigma_3^2 + 2\sigma_1\sigma_2 + 2\sigma_2\sigma_3 + 2\sigma_3\sigma_1) \quad (5-7)$$

Then the distortion energy is obtained by subtracting Eq. (5–7) from Eq. (b). This gives

$$u_d = u - u_v = \frac{1 + \nu}{3E} \left[\frac{(\sigma_1 - \sigma_2)^2 + (\sigma_2 - \sigma_3)^2 + (\sigma_3 - \sigma_1)^2}{2} \right] \quad (5-8)$$

Note that the distortion energy is zero if $\sigma_1 = \sigma_2 = \sigma_3$.

For the simple tensile test, at yield, $\sigma_1 = S_y$ and $\sigma_2 = \sigma_3 = 0$, and from Eq. (5–8) the distortion energy is

$$u_d = \frac{1 + \nu}{3E} S_y^2 \quad (5-9)$$

So for the general state of stress given by Eq. (5–8), yield is predicted if Eq. (5–8) equals or exceeds Eq. (5–9). This gives

$$\left[\frac{(\sigma_1 - \sigma_2)^2 + (\sigma_2 - \sigma_3)^2 + (\sigma_3 - \sigma_1)^2}{2} \right]^{1/2} \geq S_y \quad (5-10)$$

If we had a simple case of tension σ , then yield would occur when $\sigma \geq S_y$. Thus, the left of Eq. (5–10) can be thought of as a *single, equivalent, or effective stress* for the entire general state of stress given by σ_1 , σ_2 , and σ_3 . This effective stress is usually called the *von Mises stress*, σ' , named after Dr. R. von Mises, who contributed to the theory. Thus Eq. (5–10), for yield, can be written as

$$\sigma' \geq S_y \quad (5-11)$$

where the von Mises stress is

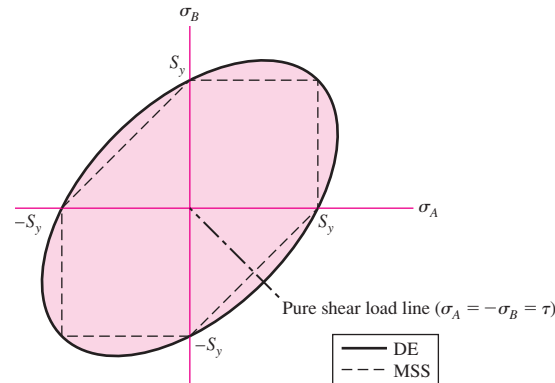
$$\sigma' = \left[\frac{(\sigma_1 - \sigma_2)^2 + (\sigma_2 - \sigma_3)^2 + (\sigma_3 - \sigma_1)^2}{2} \right]^{1/2} \quad (5-12)$$

For plane stress, let σ_A and σ_B be the two nonzero principal stresses. Then from Eq. (5–12), we get

$$\sigma' = (\sigma_A^2 - \sigma_A\sigma_B + \sigma_B^2)^{1/2} \quad (5-13)$$

Figure 5–9

The distortion-energy (DE) theory for plane stress states. This is a plot of points obtained from Eq. (5–13) with $\sigma' = S_y$.



Equation (5–13) is a rotated ellipse in the σ_A , σ_B plane, as shown in Fig. 5–9 with $\sigma' = S_y$. The dotted lines in the figure represent the MSS theory, which can be seen to be more restrictive, hence, more conservative.⁴

Using xyz components of three-dimensional stress, the von Mises stress can be written as

$$\sigma' = \frac{1}{\sqrt{2}} [(\sigma_x - \sigma_y)^2 + (\sigma_y - \sigma_z)^2 + (\sigma_z - \sigma_x)^2 + 6(\tau_{xy}^2 + \tau_{yz}^2 + \tau_{zx}^2)]^{1/2} \quad (5-14)$$

and for plane stress,

$$\sigma' = (\sigma_x^2 - \sigma_x \sigma_y + \sigma_y^2 + 3\tau_{xy}^2)^{1/2} \quad (5-15)$$

The distortion-energy theory is also called:

- The von Mises or von Mises–Hencky theory
- The shear-energy theory
- The octahedral-shear-stress theory

Understanding octahedral shear stress will shed some light on why the MSS is conservative. Consider an isolated element in which the normal stresses on each surface are equal to the hydrostatic stress σ_{av} . There are eight surfaces symmetric to the principal directions that contain this stress. This forms an octahedron as shown in Fig. 5–10. The shear stresses on these surfaces are equal and are called the *octahedral shear stresses* (Fig. 5–10 has only one of the octahedral surfaces labeled). Through coordinate transformations the octahedral shear stress is given by⁵

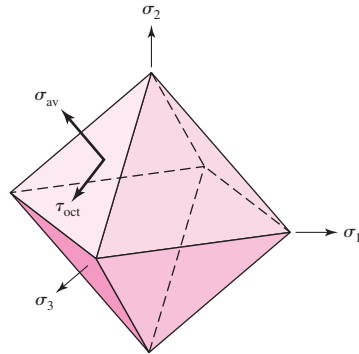
$$\tau_{oct} = \frac{1}{3} [(\sigma_1 - \sigma_2)^2 + (\sigma_2 - \sigma_3)^2 + (\sigma_3 - \sigma_1)^2]^{1/2} \quad (5-16)$$

⁴The three-dimensional equations for DE and MSS can be plotted relative to three-dimensional σ_1 , σ_2 , σ_3 , coordinate axes. The failure surface for DE is a circular cylinder with an axis inclined at 45° from each principal stress axis, whereas the surface for MSS is a hexagon inscribed within the cylinder. See Arthur P. Boresi and Richard J. Schmidt, *Advanced Mechanics of Materials*, 6th ed., John Wiley & Sons, New York, 2003, Sec. 4.4.

⁵For a derivation, see Arthur P. Boresi, op. cit., pp. 36–37.

Figure 5-10

Octahedral surfaces.



Under the name of the octahedral-shear-stress theory, *failure is assumed to occur whenever the octahedral shear stress for any stress state equals or exceeds the octahedral shear stress for the simple tension-test specimen at failure.*

As before, on the basis of the tensile test results, yield occurs when $\sigma_1 = S_y$ and $\sigma_2 = \sigma_3 = 0$. From Eq. (5-16) the octahedral shear stress under this condition is

$$\tau_{\text{oct}} = \frac{\sqrt{2}}{3} S_y \quad (5-17)$$

When, for the general stress case, Eq. (5-16) is equal or greater than Eq. (5-17), yield is predicted. This reduces to

$$\left[\frac{(\sigma_1 - \sigma_2)^2 + (\sigma_2 - \sigma_3)^2 + (\sigma_3 - \sigma_1)^2}{2} \right]^{1/2} \geq S_y \quad (5-18)$$

which is identical to Eq. (5-10), verifying that the maximum-octahedral-shear-stress theory is equivalent to the distortion-energy theory.

The model for the MSS theory ignores the contribution of the normal stresses on the 45° surfaces of the tensile specimen. However, these stresses are $P/2A$, and *not* the hydrostatic stresses which are $P/3A$. Herein lies the difference between the MSS and DE theories.

The mathematical manipulation involved in describing the DE theory might tend to obscure the real value and usefulness of the result. The equations given allow the most complicated stress situation to be represented by a single quantity, the von Mises stress, which then can be compared against the yield strength of the material through Eq. (5-11). This equation can be expressed as a design equation by

$$\sigma' = \frac{S_y}{n} \quad (5-19)$$

The distortion-energy theory predicts no failure under hydrostatic stress and agrees well with all data for ductile behavior. Hence, it is the most widely used theory for ductile materials and is recommended for design problems unless otherwise specified.

One final note concerns the shear yield strength. Consider a case of pure shear τ_{xy} , where for plane stress $\sigma_x = \sigma_y = 0$. For yield, Eq. (5-11) with Eq. (5-15) gives

$$(3\tau_{xy}^2)^{1/2} = S_y \quad \text{or} \quad \tau_{xy} = \frac{S_y}{\sqrt{3}} = 0.577S_y \quad (5-20)$$

Thus, the shear yield strength predicted by the distortion-energy theory is

$$S_{sy} = 0.577S_y \quad (5-21)$$

which as stated earlier, is about 15 percent greater than the $0.5 S_y$ predicted by the MSS theory. For pure shear, τ_{xy} the principal stresses from Eq. (3–13) are $\sigma_A = -\sigma_B = \tau_{xy}$. The load line for this case is in the third quadrant at an angle of 45° from the σ_A, σ_B axes shown in Fig. 5–9.

EXAMPLE 5-1

A hot-rolled steel has a yield strength of $S_{yt} = S_{yc} = 100$ kpsi and a true strain at fracture of $\epsilon_f = 0.55$. Estimate the factor of safety for the following principal stress states:

- (a) 70, 70, 0 kpsi.
- (b) 30, 70, 0 kpsi.
- (c) 0, 70, –30 kpsi.
- (d) 0, –30, –70 kpsi.
- (e) 30, 30, 30 kpsi.

Solution

Since $\epsilon_f > 0.05$ and S_{yc} and S_{yt} are equal, the material is ductile and the distortion-energy (DE) theory applies. The maximum-shear-stress (MSS) theory will also be applied and compared to the DE results. Note that cases *a* to *d* are plane stress states.

(a) The ordered principal stresses are $\sigma_A = \sigma_1 = 70, \sigma_B = \sigma_2 = 70, \sigma_3 = 0$ kpsi.

DE From Eq. (5–13),

$$\sigma' = [70^2 - 70(70) + 70^2]^{1/2} = 70 \text{ kpsi}$$

Answer

$$n = \frac{S_y}{\sigma'} = \frac{100}{70} = 1.43$$

MSS Case 1, using Eq. (5–4) with a factor of safety,

Answer

$$n = \frac{S_y}{\sigma_A} = \frac{100}{70} = 1.43$$

(b) The ordered principal stresses are $\sigma_A = \sigma_1 = 70, \sigma_B = \sigma_2 = 30, \sigma_3 = 0$ kpsi.

DE

$$\sigma' = [70^2 - 70(30) + 30^2]^{1/2} = 60.8 \text{ kpsi}$$

Answer

$$n = \frac{S_y}{\sigma'} = \frac{100}{60.8} = 1.64$$

MSS Case 1, using Eq. (5–4),

Answer

$$n = \frac{S_y}{\sigma_A} = \frac{100}{70} = 1.43$$

(c) The ordered principal stresses are $\sigma_A = \sigma_1 = 70$, $\sigma_2 = 0$, $\sigma_B = \sigma_3 = -30$ kpsi.

$$\text{DE} \quad \sigma' = [70^2 - 70(-30) + (-30)^2]^{1/2} = 88.9 \text{ kpsi}$$

$$\text{Answer} \quad n = \frac{S_y}{\sigma'} = \frac{100}{88.9} = 1.13$$

MSS Case 2, using Eq. (5-5),

$$\text{Answer} \quad n = \frac{S_y}{\sigma_A - \sigma_B} = \frac{100}{70 - (-30)} = 1.00$$

(d) The ordered principal stresses are $\sigma_1 = 0$, $\sigma_A = \sigma_2 = -30$, $\sigma_B = \sigma_3 = -70$ kpsi.

$$\text{DE} \quad \sigma' = [(-70)^2 - (-70)(-30) + (-30)^2]^{1/2} = 60.8 \text{ kpsi}$$

$$\text{Answer} \quad n = \frac{S_y}{\sigma'} = \frac{100}{60.8} = 1.64$$

MSS Case 3, using Eq. (5-6),

$$\text{Answer} \quad n = -\frac{S_y}{\sigma_B} = -\frac{100}{-70} = 1.43$$

(e) The ordered principal stresses are $\sigma_1 = 30$, $\sigma_2 = 30$, $\sigma_3 = 30$ kpsi

DE From Eq. (5-12),

$$\sigma' = \left[\frac{(30 - 30)^2 + (30 - 30)^2 + (30 - 30)^2}{2} \right]^{1/2} = 0 \text{ kpsi}$$

$$\text{Answer} \quad n = \frac{S_y}{\sigma'} = \frac{100}{0} \rightarrow \infty$$

MSS From Eq. (5-3),

$$\text{Answer} \quad n = \frac{S_y}{\sigma_1 - \sigma_3} = \frac{100}{30 - 30} \rightarrow \infty$$

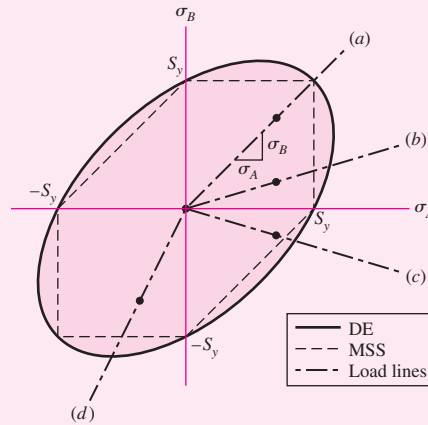
A tabular summary of the factors of safety is included for comparisons.

	(a)	(b)	(c)	(d)	(e)
DE	1.43	1.64	1.13	1.64	∞
MSS	1.43	1.43	1.00	1.43	∞

Since the MSS theory is on or within the boundary of the DE theory, it will always predict a factor of safety equal to or less than the DE theory, as can be seen in the table. For each case, except case (e), the coordinates and load lines in the σ_A , σ_B plane are shown in Fig. 5-11. Case (e) is not plane stress. Note that the load line for case (a) is

Figure 5-11

Load lines for Example 5-1.



the only plane stress case given in which the two theories agree, thus giving the same factor of safety.

5-6 Coulomb-Mohr Theory for Ductile Materials

Not all materials have compressive strengths equal to their corresponding tensile values. For example, the yield strength of magnesium alloys in compression may be as little as 50 percent of their yield strength in tension. The ultimate strength of gray cast irons in compression varies from 3 to 4 times greater than the ultimate tensile strength. So, in this section, we are primarily interested in those theories that can be used to predict failure for materials whose strengths in tension and compression are not equal.

Historically, the Mohr theory of failure dates to 1900, a date that is relevant to its presentation. There were no computers, just slide rules, compasses, and French curves. Graphical procedures, common then, are still useful today for visualization. The idea of Mohr is based on three “simple” tests: tension, compression, and shear, to yielding if the material can yield, or to rupture. It is easier to define shear yield strength as S_{sy} than it is to test for it.

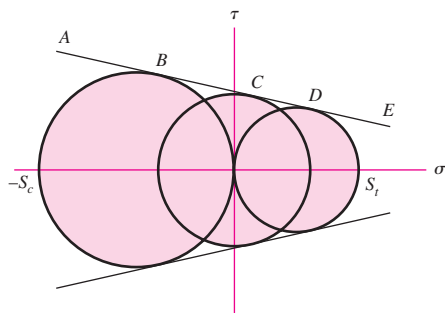
The practical difficulties aside, Mohr’s hypothesis was to use the results of tensile, compressive, and torsional shear tests to construct the three circles of Fig. 5-12 defining a failure envelope, depicted as line $ABCDE$ in the figure, above the σ axis. The failure envelope need not be straight. The argument amounted to the three Mohr circles describing the stress state in a body (see Fig. 3-12) growing during loading until one of them became tangent to the failure envelope, thereby defining failure. Was the form of the failure envelope straight, circular, or quadratic? A compass or a French curve defined the failure envelope.

A variation of Mohr’s theory, called the *Coulomb-Mohr theory* or the *internal-friction theory*, assumes that the boundary BCD in Fig. 5-12 is straight. With this assumption only the tensile and compressive strengths are necessary. Consider the conventional ordering of the principal stresses such that $\sigma_1 \geq \sigma_2 \geq \sigma_3$. The largest circle connects σ_1 and σ_3 , as shown in Fig. 5-13. The centers of the circles in Fig. 5-13 are C_1 , C_2 , and C_3 . Triangles OB_iC_i are similar, therefore

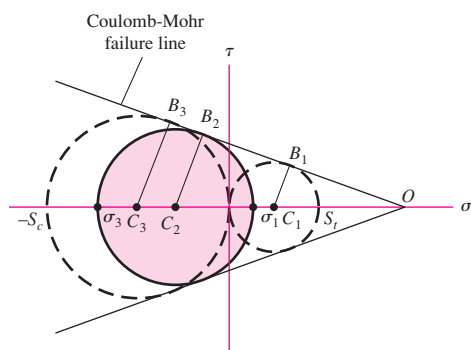
$$\frac{B_2C_2 - B_1C_1}{OC_2 - OC_1} = \frac{B_3C_3 - B_1C_1}{OC_3 - OC_1}$$

Figure 5-12

Three Mohr circles, one for the uniaxial compression test, one for the test in pure shear, and one for the uniaxial tension test, are used to define failure by the Mohr hypothesis. The strengths S_c and S_t are the compressive and tensile strengths, respectively; they can be used for yield or ultimate strength.

**Figure 5-13**

Mohr's largest circle for a general state of stress.



or

$$\frac{\frac{\sigma_1 - \sigma_3}{2} - \frac{S_t}{2}}{\frac{S_t}{2} - \frac{\sigma_1 + \sigma_3}{2}} = \frac{\frac{S_c}{2} - \frac{S_t}{2}}{\frac{S_c}{2} + \frac{S_t}{2}}$$

Cross-multiplying and simplifying reduces this equation to

$$\frac{\sigma_1}{S_t} - \frac{\sigma_3}{S_c} = 1 \quad (5-22)$$

where either yield strength or ultimate strength can be used.

For plane stress, when the two nonzero principal stresses are $\sigma_A \geq \sigma_B$, we have a situation similar to the three cases given for the MSS theory, Eqs. (5-4) to (5-6). That is,

Case 1: $\sigma_A \geq \sigma_B \geq 0$. For this case, $\sigma_1 = \sigma_A$ and $\sigma_3 = 0$. Equation (5-22) reduces to a failure condition of

$$\sigma_A \geq S_t \quad (5-23)$$

Case 2: $\sigma_A \geq 0 \geq \sigma_B$. Here, $\sigma_1 = \sigma_A$ and $\sigma_3 = \sigma_B$, and Eq. (5-22) becomes

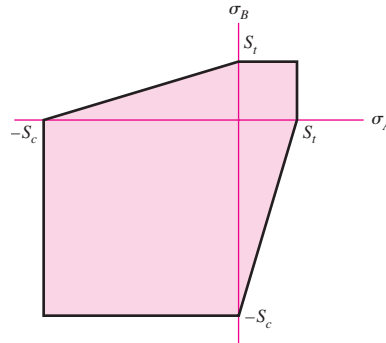
$$\frac{\sigma_A}{S_t} - \frac{\sigma_B}{S_c} \geq 1 \quad (5-24)$$

Case 3: $0 \geq \sigma_A \geq \sigma_B$. For this case, $\sigma_1 = 0$ and $\sigma_3 = \sigma_B$, and Eq. (5-22) gives

$$\sigma_B \leq -S_c \quad (5-25)$$

Figure 5-14

Plot of the Coulomb-Mohr theory of failure for plane stress states.



A plot of these cases, together with the normally unused cases corresponding to $\sigma_B \geq \sigma_A$, is shown in Fig. 5-14.

For design equations, incorporating the factor of safety n , divide all strengths by n . For example, Eq. (5-22) as a design equation can be written as

$$\frac{\sigma_1}{S_t} - \frac{\sigma_3}{S_c} = \frac{1}{n} \quad (5-26)$$

Since for the Coulomb-Mohr theory we do not need the torsional shear strength circle we can deduce it from Eq. (5-22). For pure shear τ , $\sigma_1 = -\sigma_3 = \tau$. The torsional yield strength occurs when $\tau_{\max} = S_{sy}$. Substituting $\sigma_1 = -\sigma_3 = S_{sy}$ into Eq. (5-22) and simplifying gives

$$S_{sy} = \frac{S_{yt}S_{yc}}{S_{yt} + S_{yc}} \quad (5-27)$$

EXAMPLE 5-2

A 25-mm-diameter shaft is statically torqued to 230 N · m. It is made of cast 195-T6 aluminum, with a yield strength in tension of 160 MPa and a yield strength in compression of 170 MPa. It is machined to final diameter. Estimate the factor of safety of the shaft.

Solution The maximum shear stress is given by

$$\tau = \frac{16T}{\pi d^3} = \frac{16(230)}{\pi [25(10^{-3})]^3} = 75(10^6) \text{ N/m}^2 = 75 \text{ MPa}$$

The two nonzero principal stresses are 75 and -75 MPa, making the ordered principal stresses $\sigma_1 = 75$, $\sigma_2 = 0$, and $\sigma_3 = -75$ MPa. From Eq. (5-26), for yield,

Answer

$$n = \frac{1}{\sigma_1/S_{yt} - \sigma_3/S_{yc}} = \frac{1}{75/160 - (-75)/170} = 1.10$$

Alternatively, from Eq. (5-27),

$$S_{sy} = \frac{S_{yt}S_{yc}}{S_{yt} + S_{yc}} = \frac{160(170)}{160 + 170} = 82.4 \text{ MPa}$$

and $\tau_{\max} = 75$ MPa. Thus,

Answer

$$n = \frac{S_{sy}}{\tau_{\max}} = \frac{82.4}{75} = 1.10$$

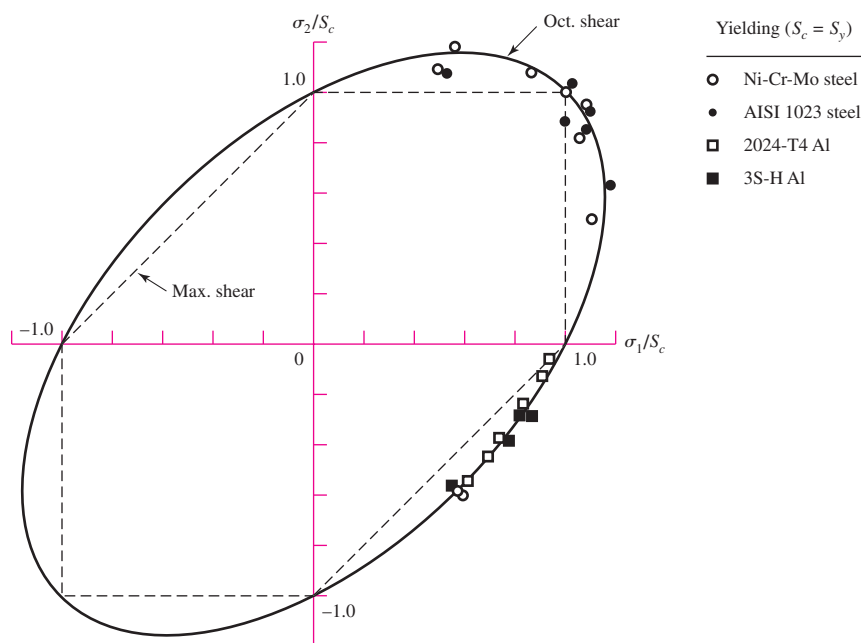
5-7 Failure of Ductile Materials Summary

Having studied some of the various theories of failure, we shall now evaluate them and show how they are applied in design and analysis. In this section we limit our studies to materials and parts that are known to fail in a ductile manner. Materials that fail in a brittle manner will be considered separately because these require different failure theories.

To help decide on appropriate and workable theories of failure, Marin⁶ collected data from many sources. Some of the data points used to select failure theories for ductile materials are shown in Fig. 5-15.⁷ Mann also collected many data for copper and nickel alloys; if shown, the data points for these would be mingled with those already diagrammed. Figure 5-15 shows that either the maximum-shear-stress theory or the distortion-energy theory is acceptable for design and analysis of materials that would

Figure 5-15

Experimental data superposed on failure theories. (From Fig. 7.11, p. 257, *Mechanical Behavior of Materials*, 2nd ed., N. E. Dowling, Prentice Hall, Englewood Cliffs, N.J., 1999. Modified to show only ductile failures.)



⁶Joseph Marin was one of the pioneers in the collection, development, and dissemination of material on the failure of engineering elements. He has published many books and papers on the subject. Here the reference used is Joseph Marin, *Engineering Materials*, Prentice-Hall, Englewood Cliffs, N.J., 1952. (See pp. 156 and 157 for some data points used here.)

⁷Note that some data in Fig. 5-15 are displayed along the top horizontal boundary where $\sigma_B \geq \sigma_A$. This is often done with failure data to thin out congested data points by plotting on the mirror image of the line $\sigma_B = \sigma_A$.

fail in a ductile manner. You may wish to plot other theories using a red or blue pencil on Fig. 5–15 to show why they are not acceptable or are not used.

The selection of one or the other of these two theories is something that you, the engineer, must decide. For design purposes the maximum-shear-stress theory is easy, quick to use, and conservative. If the problem is to learn why a part failed, then the distortion-energy theory may be the best to use; Fig. 5–15 shows that the plot of the distortion-energy theory passes closer to the central area of the data points, and thus is generally a better predictor of failure.

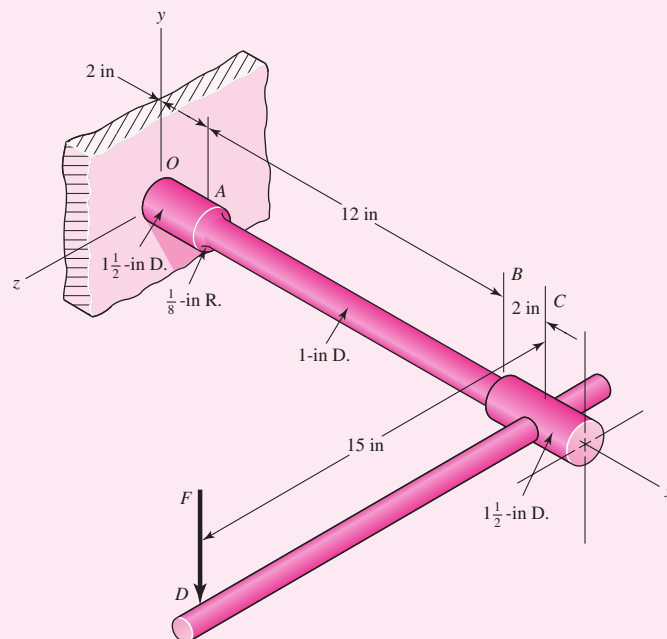
For ductile materials with unequal yield strengths, S_{yt} in tension and S_{yc} in compression, the Mohr theory is the best available. However, the theory requires the results from three separate modes of tests, graphical construction of the failure locus, and fitting the largest Mohr's circle to the failure locus. The alternative to this is to use the Coulomb-Mohr theory, which requires only the tensile and compressive yield strengths and is easily dealt with in equation form.

EXAMPLE 5-3

This example illustrates the use of a failure theory to determine the strength of a mechanical element or component. The example may also clear up any confusion existing between the phrases *strength of a machine part*, *strength of a material*, and *strength of a part at a point*.

A certain force F applied at D near the end of the 15-in lever shown in Fig. 5–16, which is quite similar to a socket wrench, results in certain stresses in the cantilevered bar $OABC$. This bar ($OABC$) is of AISI 1035 steel, forged and heat-treated so that it has a minimum (ASTM) yield strength of 81 kpsi. We presume that this component would be of no value after yielding. Thus the force F required to initiate yielding can be regarded as the strength of the component part. Find this force.

| Figure 5-16



Solution We will assume that lever DC is strong enough and hence not a part of the problem. A 1035 steel, heat-treated, will have a reduction in area of 50 percent or more and hence is a ductile material at normal temperatures. This also means that stress concentration at shoulder A need not be considered. A stress element at A on the top surface will be subjected to a tensile bending stress and a torsional stress. This point, on the 1-in-diameter section, is the weakest section, and governs the strength of the assembly. The two stresses are

$$\sigma_x = \frac{M}{I/c} = \frac{32M}{\pi d^3} = \frac{32(14F)}{\pi(1^3)} = 142.6F$$

$$\tau_{zx} = \frac{Tr}{J} = \frac{16T}{\pi d^3} = \frac{16(15F)}{\pi(1^3)} = 76.4F$$

Employing the distortion-energy theory, we find, from Eq. (5–15), that

$$\sigma' = (\sigma_x^2 + 3\tau_{zx}^2)^{1/2} = [(142.6F)^2 + 3(76.4F)^2]^{1/2} = 194.5F$$

Equating the von Mises stress to S_y , we solve for F and get

Answer

$$F = \frac{S_y}{194.5} = \frac{81\,000}{194.5} = 416 \text{ lbf}$$

In this example the strength of the material at point A is $S_y = 81$ kpsi. The strength of the assembly or component is $F = 416$ lbf.

Let us see how to apply the MSS theory. For a point undergoing plane stress with only one non-zero normal stress and one shear stress, the two nonzero principal stresses σ_A and σ_B will have opposite signs and hence fit case 2 for the MSS theory. From Eq. (3–13),

$$\sigma_A - \sigma_B = 2 \left[\left(\frac{\sigma_x}{2} \right)^2 + \tau_{zx}^2 \right]^{1/2} = (\sigma_x^2 + 4\tau_{zx}^2)^{1/2}$$

For case 2 of the MSS theory, Eq. (5–5) applies and hence

$$(\sigma_x^2 + 4\tau_{zx}^2)^{1/2} = S_y$$

$$[(142.6F)^2 + 4(76.4F)^2]^{1/2} = 209.0F = 81\,000$$

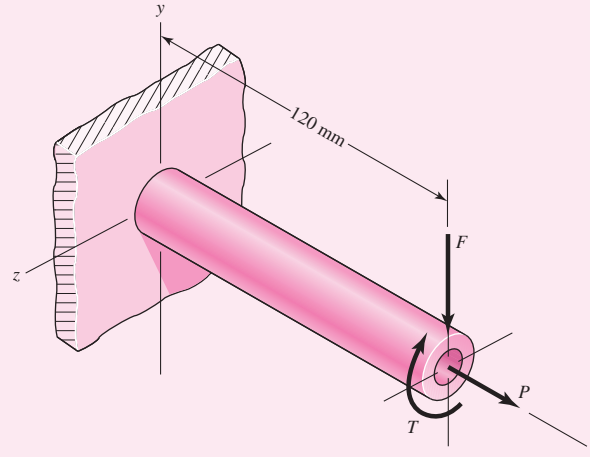
$$F = 388 \text{ lbf}$$

which is about 7 percent less than found for the DE theory. As stated earlier, the MSS theory is more conservative than the DE theory.

EXAMPLE 5–4

The cantilevered tube shown in Fig. 5–17 is to be made of 2014 aluminum alloy treated to obtain a specified minimum yield strength of 276 MPa. We wish to select a stock-size tube from Table A–8 using a design factor $n_d = 4$. The bending load is $F = 1.75$ kN, the axial tension is $P = 9.0$ kN, and the torsion is $T = 72$ N · m. What is the realized factor of safety?

| Figure 5-17



Solution Since the maximum bending moment is $M = 120F$, the normal stress, for an element on the top surface of the tube at the origin, is

$$\sigma_x = \frac{P}{A} + \frac{Mc}{I} = \frac{9}{A} + \frac{120(1.75)(d_o/2)}{I} = \frac{9}{A} + \frac{105d_o}{I} \quad (1)$$

where, if millimeters are used for the area properties, the stress is in gigapascals.

The torsional stress at the same point is

$$\tau_{zx} = \frac{Tr}{J} = \frac{72(d_o/2)}{J} = \frac{36d_o}{J} \quad (2)$$

For accuracy, we choose the distortion-energy theory as the design basis. The von Mises stress, as in the previous example, is

$$\sigma' = (\sigma_x^2 + 3\tau_{zx}^2)^{1/2} \quad (3)$$

On the basis of the given design factor, the goal for σ' is

$$\sigma' \leq \frac{S_y}{n_d} = \frac{0.276}{4} = 0.0690 \text{ GPa} \quad (4)$$

where we have used gigapascals in this relation to agree with Eqs. (1) and (2).

Programming Eqs. (1) to (3) on a spreadsheet and entering metric sizes from Table A-8 reveals that a 42- × 5-mm tube is satisfactory. The von Mises stress is found to be $\sigma' = 0.06043$ GPa for this size. Thus the realized factor of safety is

Answer
$$n = \frac{S_y}{\sigma'} = \frac{0.276}{0.06043} = 4.57$$

For the next size smaller, a 42- × 4-mm tube, $\sigma' = 0.07105$ GPa giving a factor of safety of

$$n = \frac{S_y}{\sigma'} = \frac{0.276}{0.07105} = 3.88$$

5–8 Maximum-Normal-Stress Theory for Brittle Materials

The maximum-normal-stress (MNS) theory states that *failure occurs whenever one of the three principal stresses equals or exceeds the strength*. Again we arrange the principal stresses for a general stress state in the ordered form $\sigma_1 \geq \sigma_2 \geq \sigma_3$. This theory then predicts that failure occurs whenever

$$\sigma_1 \geq S_{ut} \quad \text{or} \quad \sigma_3 \leq -S_{uc} \quad (5-28)$$

where S_{ut} and S_{uc} are the ultimate tensile and compressive strengths, respectively, given as positive quantities.

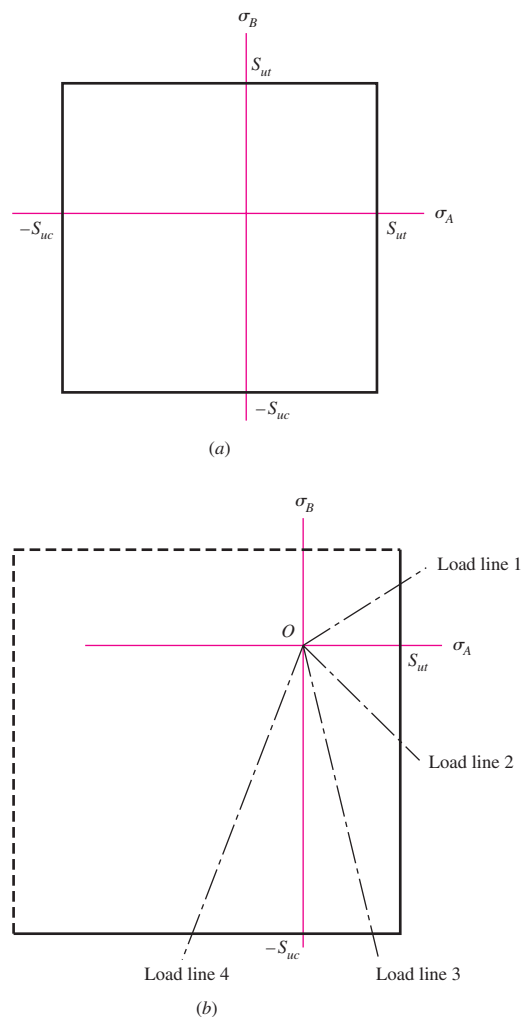
For plane stress, with the principal stresses given by Eq. (3–13), with $\sigma_A \geq \sigma_B$, Eq. (5–28) can be written as

$$\sigma_A \geq S_{ut} \quad \text{or} \quad \sigma_B \leq -S_{uc} \quad (5-29)$$

which is plotted in Fig. 5–18*a*. As before, the failure criteria equations can be converted to design equations. We can consider two sets of equations for load lines where $\sigma_A \geq \sigma_B$ as

Figure 5–18

- (*a*) Graph of maximum-normal-stress (MNS) theory of failure for plane stress states. Stress states that plot inside the failure locus are safe.
(*b*) Load line plot.



$$\begin{aligned} \sigma_A = \frac{S_{ut}}{n} \quad \sigma_A \geq \sigma_B \geq 0 & \quad \text{Load line 1} \\ \sigma_A \geq 0 \geq \sigma_B \quad \text{and} \quad \left| \frac{\sigma_B}{\sigma_A} \right| \leq \frac{S_{uc}}{S_{ut}} & \quad \text{Load line 2} \quad (5-30a) \\ \sigma_B = -\frac{S_{uc}}{n} \quad \sigma_A \geq 0 \geq \sigma_B \quad \text{and} \quad \left| \frac{\sigma_B}{\sigma_A} \right| > \frac{S_{uc}}{S_{ut}} & \quad \text{Load line 3} \\ 0 \geq \sigma_A \geq \sigma_B & \quad \text{Load line 4} \quad (5-30b) \end{aligned}$$

where the load lines are shown in Fig. 5–18*b*.

Before we comment any further on the MNS theory we will explore some modifications to the Mohr theory for brittle materials.

5–9 Modifications of the Mohr Theory for Brittle Materials

We will discuss two modifications of the Mohr theory for brittle materials: the Brittle-Coulomb-Mohr (BCM) theory and the modified Mohr (MM) theory. The equations provided for the theories will be restricted to plane stress and be of the design type incorporating the factor of safety.

The Coulomb-Mohr theory was discussed earlier in Sec. 5–6 with Eqs. (5–23) to (5–25). Written as design equations for a brittle material, they are:

Brittle-Coulomb-Mohr

$$\sigma_A = \frac{S_{ut}}{n} \quad \sigma_A \geq \sigma_B \geq 0 \quad (5-31a)$$

$$\frac{\sigma_A}{S_{ut}} - \frac{\sigma_B}{S_{uc}} = \frac{1}{n} \quad \sigma_A \geq 0 \geq \sigma_B \quad (5-31b)$$

$$\sigma_B = -\frac{S_{uc}}{n} \quad 0 \geq \sigma_A \geq \sigma_B \quad (5-31c)$$

On the basis of observed data for the fourth quadrant, the modified Mohr theory expands the fourth quadrant as shown in Fig. 5–19.

Modified Mohr

$$\begin{aligned} \sigma_A = \frac{S_{ut}}{n} \quad \sigma_A \geq \sigma_B \geq 0 & \quad (5-32a) \\ \sigma_A \geq 0 \geq \sigma_B \quad \text{and} \quad \left| \frac{\sigma_B}{\sigma_A} \right| \leq 1 & \end{aligned}$$

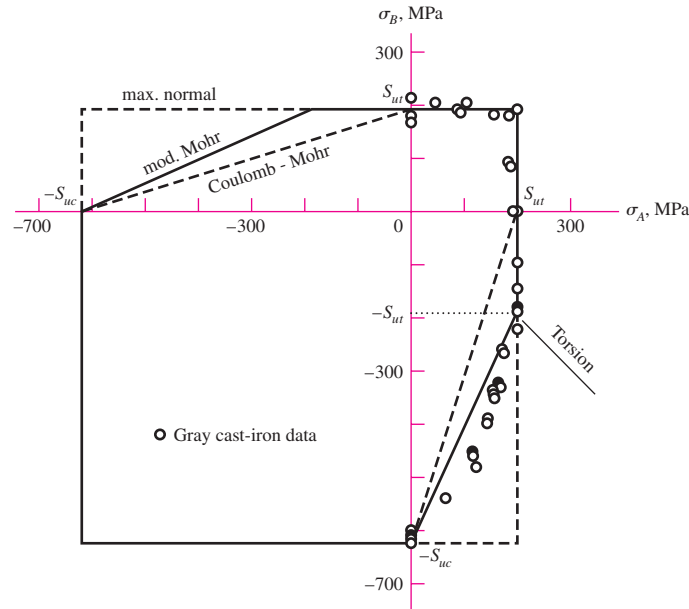
$$\frac{(S_{uc} - S_{ut}) \sigma_A}{S_{uc} S_{ut}} - \frac{\sigma_B}{S_{uc}} = \frac{1}{n} \quad \sigma_A \geq 0 \geq \sigma_B \quad \text{and} \quad \left| \frac{\sigma_B}{\sigma_A} \right| > 1 \quad (5-32b)$$

$$\sigma_B = -\frac{S_{uc}}{n} \quad 0 \geq \sigma_A \geq \sigma_B \quad (5-32c)$$

Data are still outside this extended region. The straight line introduced by the modified Mohr theory, for $\sigma_A \geq 0 \geq \sigma_B$ and $|\sigma_B/\sigma_A| > 1$, can be replaced by a parabolic relation

Figure 5-19

Biaxial fracture data of gray cast iron compared with various failure criteria. (Dowling, N. E., *Mechanical Behavior of Materials*, 2/e, 1999, p. 261. Reprinted by permission of Pearson Education, Inc., Upper Saddle River, New Jersey.)



which can more closely represent some of the data.⁸ However, this introduces a nonlinear equation for the sake of a minor correction, and will not be presented here.

⁸See J. E. Shigley, C. R. Mischke, R. G. Budynas, *Mechanical Engineering Design*, 7th ed., McGraw-Hill, New York, 2004, p. 275.

EXAMPLE 5-5

Consider the wrench in Ex. 5-3, Fig. 5-16, as made of cast iron, machined to dimension. The force F required to fracture this part can be regarded as the strength of the component part. If the material is ASTM grade 30 cast iron, find the force F with
(a) Coulomb-Mohr failure model.
(b) Modified Mohr failure model.

Solution

We assume that the lever DC is strong enough, and not part of the problem. Since grade 30 cast iron is a brittle material *and* cast iron, the stress-concentration factors K_t and K_{ts} are set to unity. From Table A-24, the tensile ultimate strength is 31 kpsi and the compressive ultimate strength is 109 kpsi. The stress element at A on the top surface will be subjected to a tensile bending stress and a torsional stress. This location, on the 1-in-diameter section fillet, is the weakest location, and it governs the strength of the assembly. The normal stress σ_x and the shear stress at A are given by

$$\sigma_x = K_t \frac{M}{I/c} = K_t \frac{32M}{\pi d^3} = (1) \frac{32(14F)}{\pi(1)^3} = 142.6F$$

$$\tau_{xy} = K_{ts} \frac{Tr}{J} = K_{ts} \frac{16T}{\pi d^3} = (1) \frac{16(15F)}{\pi(1)^3} = 76.4F$$

From Eq. (3-13) the nonzero principal stresses σ_A and σ_B are

$$\sigma_A, \sigma_B = \frac{142.6F + 0}{2} \pm \sqrt{\left(\frac{142.6F - 0}{2}\right)^2 + (76.4F)^2} = 175.8F, -33.2F$$

This puts us in the fourth-quadrant of the σ_A, σ_B plane.

(a) For BCM, Eq. (5–31b) applies with $n = 1$ for failure.

$$\frac{\sigma_A}{S_{ut}} - \frac{\sigma_B}{S_{uc}} = \frac{175.8F}{31(10^3)} - \frac{(-33.2F)}{109(10^3)} = 1$$

Solving for F yields

Answer

$$F = 167 \text{ lbf}$$

(b) For MM, the slope of the load line is $|\sigma_B/\sigma_A| = 33.2/175.8 = 0.189 < 1$. Obviously, Eq. (5–32a) applies.

$$\frac{\sigma_A}{S_{ut}} = \frac{175.8F}{31(10^3)} = 1$$

Answer

$$F = 176 \text{ lbf}$$

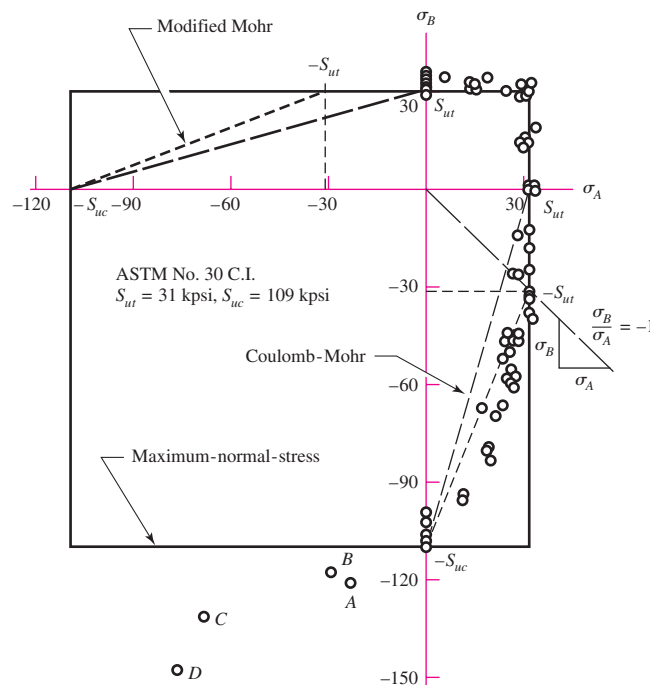
As one would expect from inspection of Fig. 5–19, Coulomb-Mohr is more conservative.

5–10 Failure of Brittle Materials Summary

We have identified failure or strength of brittle materials that conform to the usual meaning of the word *brittle*, relating to those materials whose true strain at fracture is 0.05 or less. We also have to be aware of normally ductile materials that for some reason may develop a brittle fracture or crack if used below the transition temperature. Figure 5–20 shows data for a nominal grade 30 cast iron taken under biaxial

Figure 5–20

A plot of experimental data points obtained from tests on cast iron. Shown also are the graphs of three failure theories of possible usefulness for brittle materials. Note points A, B, C, and D. To avoid congestion in the first quadrant, points have been plotted for $\sigma_A > \sigma_B$ as well as for the opposite sense. (Source of data: Charles F. Walton (ed.), *Iron Castings Handbook, Iron Founders' Society, 1971, pp. 215, 216, Cleveland, Ohio.*)



stress conditions, with several brittle failure hypotheses shown, superposed. We note the following:

- In the first quadrant the data appear on both sides and along the failure curves of maximum-normal-stress, Coulomb-Mohr, and modified Mohr. All failure curves are the same, and data fit well.
- In the fourth quadrant the modified Mohr theory represents the data best.
- In the third quadrant the points *A*, *B*, *C*, and *D* are too few to make any suggestion concerning a fracture locus.

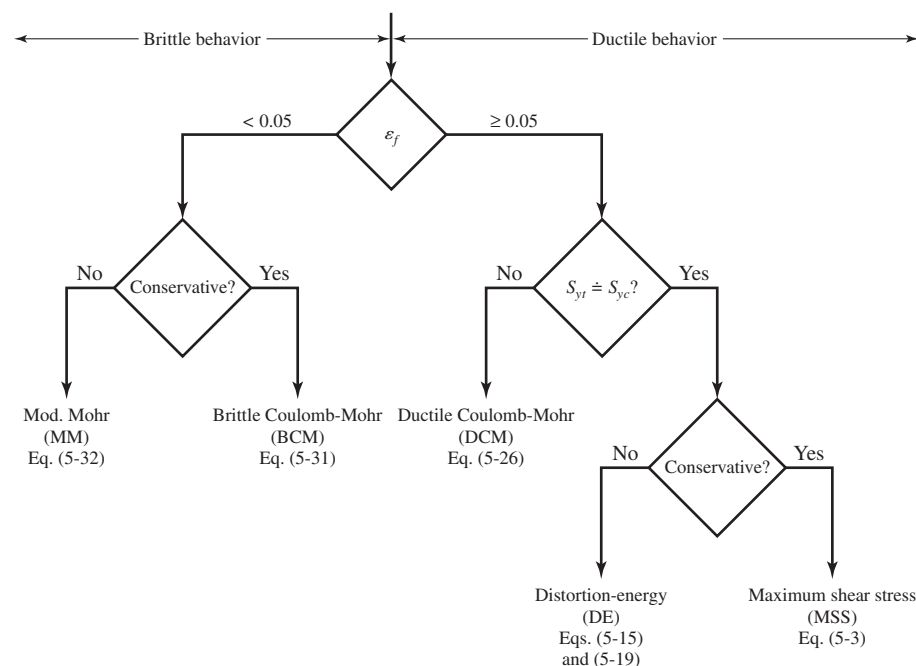
5-11 Selection of Failure Criteria

For ductile behavior the preferred criterion is the distortion-energy theory, although some designers also apply the maximum-shear-stress theory because of its simplicity and conservative nature. In the rare case when $S_{yt} \neq S_{yc}$, the ductile Coulomb-Mohr method is employed.

For brittle behavior, the original Mohr hypothesis, constructed with tensile, compression, and torsion tests, with a curved failure locus is the best hypothesis we have. However, the difficulty of applying it without a computer leads engineers to choose modifications, namely, Coulomb Mohr, or modified Mohr. Figure 5-21 provides a summary flowchart for the selection of an effective procedure for analyzing or predicting failures from static loading for brittle or ductile behavior.

Figure 5-21

Failure theory selection flowchart.



5-12 Introduction to Fracture Mechanics

The idea that cracks exist in parts even before service begins, and that cracks can grow during service, has led to the descriptive phrase “damage-tolerant design.” The focus of this philosophy is on crack growth until it becomes critical, and the part is removed from service. The analysis tool is *linear elastic fracture mechanics* (LEFM). Inspection and maintenance are essential in the decision to retire parts before cracks reach catastrophic size. Where human safety is concerned, periodic inspections for cracks are mandated by codes and government ordinance.

We shall now briefly examine some of the basic ideas and vocabulary needed for the potential of the approach to be appreciated. The intent here is to make the reader aware of the dangers associated with the sudden brittle fracture of so-called ductile materials. The topic is much too extensive to include in detail here and the reader is urged to read further on this complex subject.⁹

The use of elastic stress-concentration factors provides an indication of the average load required on a part for the onset of plastic deformation, or yielding; these factors are also useful for analysis of the loads on a part that will cause fatigue fracture. However, stress-concentration factors are limited to structures for which all dimensions are precisely known, particularly the radius of curvature in regions of high stress concentration. When there exists a crack, flaw, inclusion, or defect of unknown small radius in a part, the elastic stress-concentration factor approaches infinity as the root radius approaches zero, thus rendering the stress-concentration factor approach useless. Furthermore, even if the radius of curvature of the flaw tip is known, the high local stresses there will lead to local plastic deformation surrounded by a region of elastic deformation. Elastic stress-concentration factors are no longer valid for this situation, so analysis from the point of view of stress-concentration factors does not lead to criteria useful for design when very sharp cracks are present.

By combining analysis of the gross elastic changes in a structure or part that occur as a sharp brittle crack grows with measurements of the energy required to produce new fracture surfaces, it is possible to calculate the average stress (if no crack were present) that will cause crack growth in a part. Such calculation is possible only for parts with cracks for which the elastic analysis has been completed, and for materials that crack in a relatively brittle manner and for which the fracture energy has been carefully measured. The term *relatively brittle* is rigorously defined in the test procedures,¹⁰ but it means, roughly, *fracture without yielding occurring throughout the fractured cross section*.

Thus glass, hard steels, strong aluminum alloys, and even low-carbon steel below the ductile-to-brittle transition temperature can be analyzed in this way. Fortunately, ductile materials blunt sharp cracks, as we have previously discovered, so that fracture occurs at average stresses of the order of the yield strength, and the designer is prepared

⁹References on brittle fracture include:

H. Tada and P. C. Paris, *The Stress Analysis of Cracks Handbook*, 2nd ed., Paris Productions, St. Louis, 1985.

D. Broek, *Elementary Engineering Fracture Mechanics*, 4th ed., Martinus Nijhoff, London, 1985.

D. Broek, *The Practical Use of Fracture Mechanics*, Kluwer Academic Pub., London, 1988.

David K. Felbeck and Anthony G. Atkins, *Strength and Fracture of Engineering Solids*, Prentice-Hall, Englewood Cliffs, N.J., 1984.

Kåre Hellan, *Introduction to Fracture Mechanics*, McGraw-Hill, New York, 1984.

¹⁰BS 5447:1977 and ASTM E399-78.

for this condition. The middle ground of materials that lie between “relatively brittle” and “ductile” is now being actively analyzed, but exact design criteria for these materials are not yet available.

Quasi-Static Fracture

Many of us have had the experience of observing brittle fracture, whether it is the breaking of a cast-iron specimen in a tensile test or the twist fracture of a piece of blackboard chalk. It happens so rapidly that we think of it as instantaneous, that is, the cross section simply parting. Fewer of us have skated on a frozen pond in the spring, with no one near us, heard a cracking noise, and stopped to observe. The noise is due to cracking. The cracks move slowly enough for us to see them run. The phenomenon is not instantaneous, since some time is necessary to feed the crack energy from the stress field to the crack for propagation. Quantifying these things is important to understanding the phenomenon “in the small.” In the large, a static crack may be stable and will not propagate. Some level of loading can render the crack unstable, and the crack propagates to fracture.

The foundation of fracture mechanics was first established by Griffith in 1921 using the stress field calculations for an elliptical flaw in a plate developed by Inglis in 1913. For the infinite plate loaded by an applied uniaxial stress σ in Fig. 5–22, the maximum stress occurs at $(\pm a, 0)$ and is given by

$$(\sigma_y)_{\max} = \left(1 + 2\frac{a}{b}\right)\sigma \quad (5-33)$$

Note that when $a = b$, the ellipse becomes a circle and Eq. (5–33) gives a stress concentration factor of 3. This agrees with the well-known result for an infinite plate with a circular hole (see Table A–15–1). For a fine crack, $b/a \rightarrow 0$, and Eq. (5–34) predicts that $(\sigma_y)_{\max} \rightarrow \infty$. However, on a microscopic level, an infinitely sharp crack is a hypothetical abstraction that is physically impossible, and when plastic deformation occurs, the stress will be finite at the crack tip.

Griffith showed that the crack growth occurs when the energy release rate from applied loading is greater than the rate of energy for crack growth. Crack growth can be stable or unstable. Unstable crack growth occurs when the *rate* of change of the energy release rate relative to the crack length is equal to or greater than the *rate* of change of the crack growth rate of energy. Griffith’s experimental work was restricted to brittle materials, namely glass, which pretty much confirmed his surface energy hypothesis. However, for ductile materials, the energy needed to perform plastic work at the crack tip is found to be much more crucial than surface energy.

| Figure 5–22

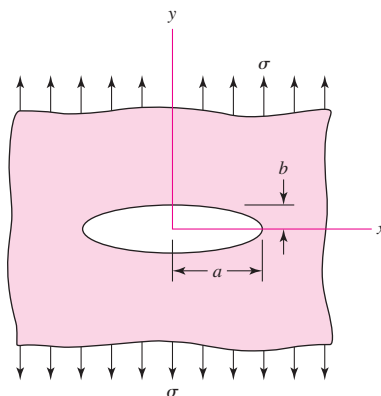
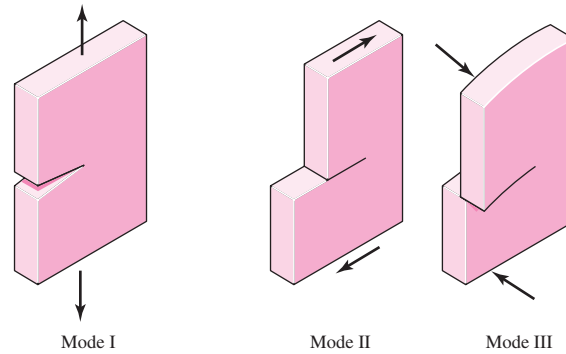


Figure 5–23

Crack propagation modes.



Crack Modes and the Stress Intensity Factor

Three distinct modes of crack propagation exist, as shown in Fig. 5–23. A tensile stress field gives rise to mode I, the *opening crack propagation mode*, as shown in Fig. 5–23a. This mode is the most common in practice. Mode II is the *sliding mode*, is due to in-plane shear, and can be seen in Fig. 5–23b. Mode III is the *tearing mode*, which arises from out-of-plane shear, as shown in Fig. 5–23c. Combinations of these modes can also occur. Since mode I is the most common and important mode, the remainder of this section will consider only this mode.

Consider a mode I crack of length $2a$ in the infinite plate of Fig. 5–24. By using complex stress functions, it has been shown that the stress field on a $dx\,dy$ element in the vicinity of the crack tip is given by

$$\sigma_x = \sigma \sqrt{\frac{a}{2r}} \cos \frac{\theta}{2} \left(1 - \sin \frac{\theta}{2} \sin \frac{3\theta}{2} \right) \quad (5-34a)$$

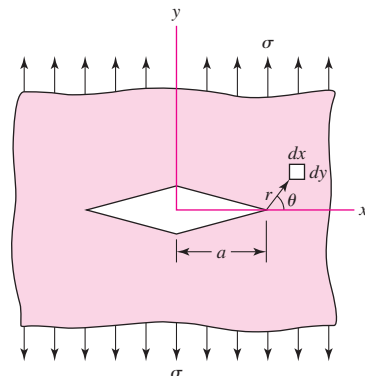
$$\sigma_y = \sigma \sqrt{\frac{a}{2r}} \cos \frac{\theta}{2} \left(1 + \sin \frac{\theta}{2} \sin \frac{3\theta}{2} \right) \quad (5-34b)$$

$$\tau_{xy} = \sigma \sqrt{\frac{a}{2r}} \sin \frac{\theta}{2} \cos \frac{\theta}{2} \cos \frac{3\theta}{2} \quad (5-34c)$$

$$\sigma_z = \begin{cases} 0 & \text{(for plane stress)} \\ \nu(\sigma_x + \sigma_y) & \text{(for plane strain)} \end{cases} \quad (5-34d)$$

Figure 5–24

Mode I crack model.



The stress σ_y near the tip, with $\theta = 0$, is

$$\sigma_y|_{\theta=0} = \sigma \sqrt{\frac{a}{2r}} \quad (a)$$

As with the elliptical crack, we see that $\sigma_y|_{\theta=0} \rightarrow \infty$ as $r \rightarrow 0$, and again the concept of an infinite stress concentration at the crack tip is inappropriate. The quantity $\sigma_y|_{\theta=0} \sqrt{2r} = \sigma \sqrt{a}$, however, does remain constant as $r \rightarrow 0$. It is common practice to define a factor K called the *stress intensity factor* given by

$$K = \sigma \sqrt{\pi a} \quad (b)$$

where the units are $\text{MPa}\sqrt{\text{m}}$ or $\text{kpsi}\sqrt{\text{in.}}$. Since we are dealing with a mode I crack, Eq. (b) is written as

$$K_I = \sigma \sqrt{\pi a} \quad (5-35)$$

The stress intensity factor is *not* to be confused with the static stress concentration factors K_t and K_{ts} defined in Secs. 3–13 and 5–2.

Thus Eqs. (5–34) can be rewritten as

$$\sigma_x = \frac{K_I}{\sqrt{2\pi r}} \cos \frac{\theta}{2} \left(1 - \sin \frac{\theta}{2} \sin \frac{3\theta}{2} \right) \quad (5-36a)$$

$$\sigma_y = \frac{K_I}{\sqrt{2\pi r}} \cos \frac{\theta}{2} \left(1 + \sin \frac{\theta}{2} \sin \frac{3\theta}{2} \right) \quad (5-36b)$$

$$\tau_{xy} = \frac{K_I}{\sqrt{2\pi r}} \sin \frac{\theta}{2} \cos \frac{\theta}{2} \cos \frac{3\theta}{2} \quad (5-36c)$$

$$\sigma_z = \begin{cases} 0 & \text{(for plane stress)} \\ \nu(\sigma_x + \sigma_y) & \text{(for plane strain)} \end{cases} \quad (5-36d)$$

The stress intensity factor is a function of geometry, size and shape of the crack, and the type of loading. For various load and geometric configurations, Eq. (5–35) can be written as

$$K_I = \beta \sigma \sqrt{\pi a} \quad (5-37)$$

where β is the *stress intensity modification factor*. Tables for β are available in the literature for basic configurations.¹¹ Figures 5–25 to 5–30 present a few examples of β for mode I crack propagation.

Fracture Toughness

When the magnitude of the mode I stress intensity factor reaches a critical value, K_{Ic} crack propagation initiates. The *critical stress intensity factor* K_{Ic} is a material property that depends on the material, crack mode, processing of the material, temperature,

¹¹See, for example:

H. Tada and P. C. Paris, *The Stress Analysis of Cracks Handbook*, 2nd ed., Paris Productions, St. Louis, 1985.

G. C. Sib, *Handbook of Stress Intensity Factors for Researchers and Engineers*, Institute of Fracture and Solid Mechanics, Lehigh University, Bethlehem, Pa., 1973.

Y. Murakami, ed., *Stress Intensity Factors Handbook*, Pergamon Press, Oxford, U.K., 1987.

W. D. Pilkey, *Formulas for Stress, Strain, and Structural Matrices*, 2nd ed. John Wiley & Sons, New York, 2005.

Figure 5–25

Off-center crack in a plate in longitudinal tension; solid curves are for the crack tip at A; dashed curves are for the tip at B.

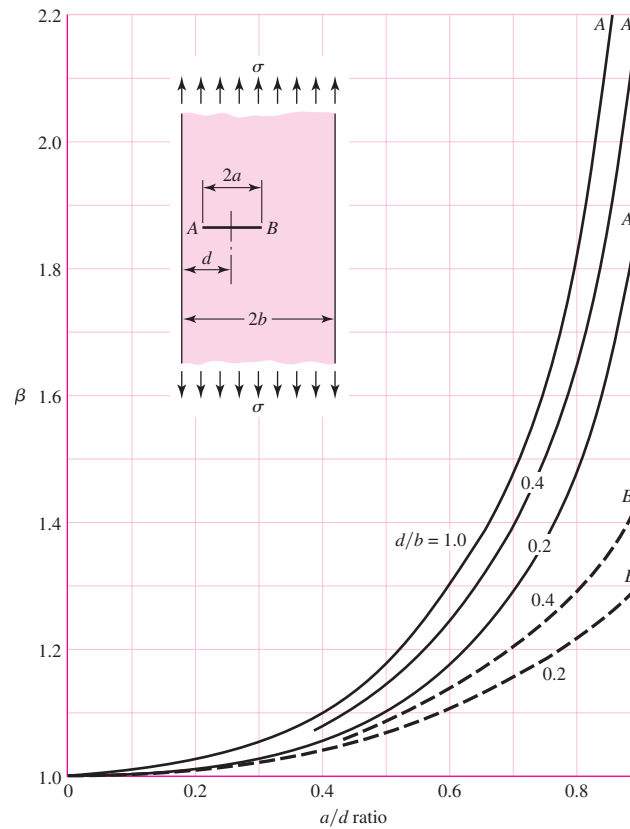


Figure 5–26

Plate loaded in longitudinal tension with a crack at the edge; for the solid curve there are no constraints to bending; the dashed curve was obtained with bending constraints added.

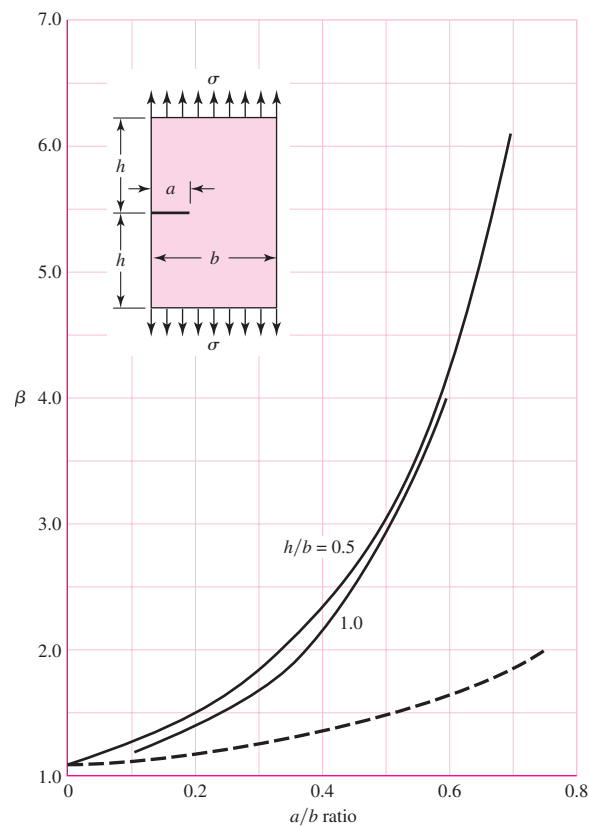


Figure 5-27

Beams of rectangular cross section having an edge crack.

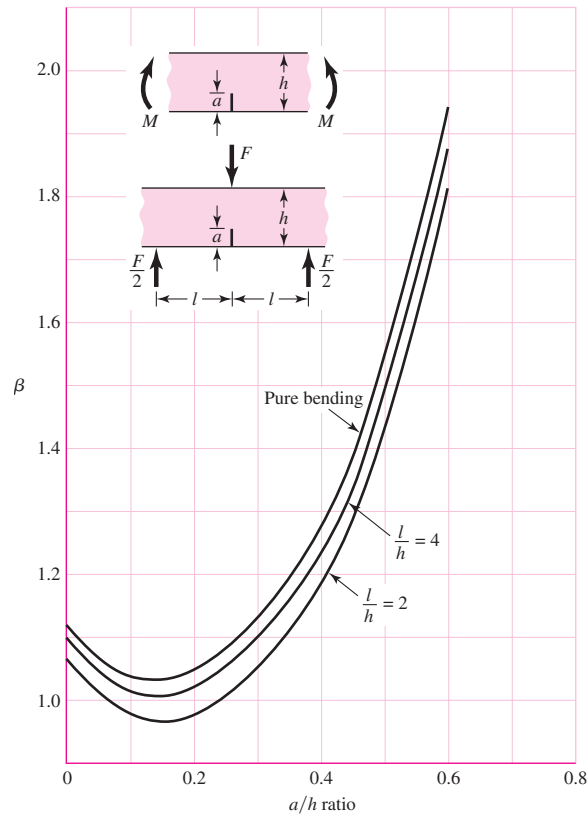
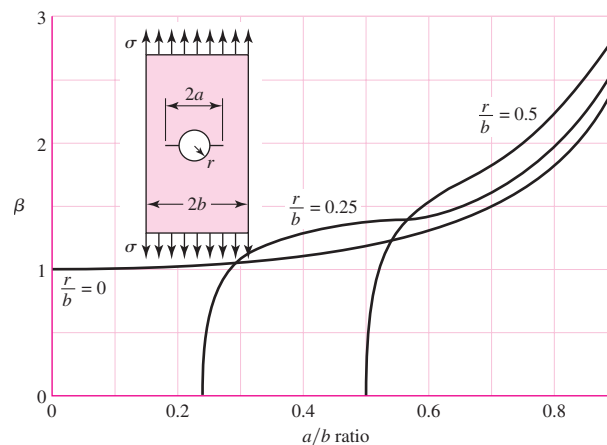
**Figure 5-28**

Plate in tension containing a circular hole with two cracks.



loading rate, and the state of stress at the crack site (such as plane stress versus plane strain). The critical stress intensity factor K_{Ic} is also called the *fracture toughness* of the material. The fracture toughness for plane strain is normally lower than that for plane stress. For this reason, the term K_{Ic} is typically defined as the *mode I, plane strain fracture toughness*. Fracture toughness K_{Ic} for engineering metals lies in the range $20 \leq K_{Ic} \leq 200 \text{ MPa} \cdot \sqrt{\text{m}}$; for engineering polymers and ceramics, $1 \leq K_{Ic} \leq 5 \text{ MPa} \cdot \sqrt{\text{m}}$. For a 4340 steel, where the yield strength due to heat treatment ranges from 800 to 1600 MPa, K_{Ic} decreases from 190 to $40 \text{ MPa} \cdot \sqrt{\text{m}}$.

Figure 5-29

A cylinder loading in axial tension having a radial crack of depth a extending completely around the circumference of the cylinder.

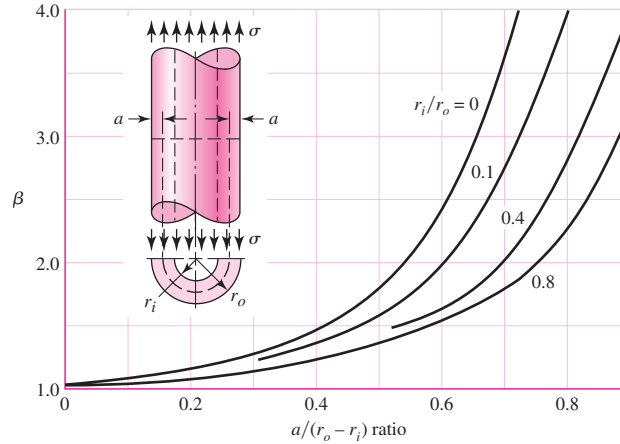


Figure 5-30

Cylinder subjected to internal pressure p , having a radial crack in the longitudinal direction of depth a . Use Eq. (4-51) for the tangential stress at $r = r_o$.

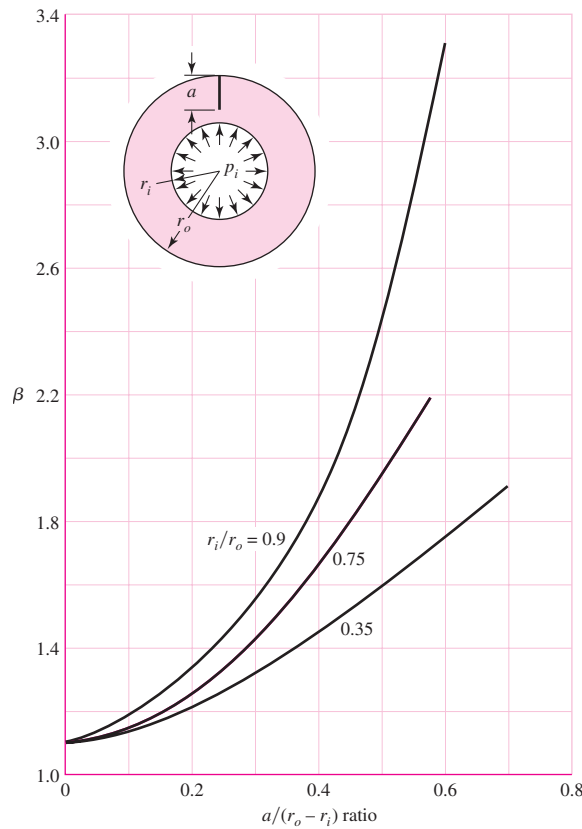


Table 5-1 gives some approximate typical room-temperature values of K_{Ic} for several materials. As previously noted, the fracture toughness depends on many factors and the table is meant only to convey some typical magnitudes of K_{Ic} . For an actual application, it is recommended that the material specified for the application be certified using standard test procedures [see the American Society for Testing and Materials (ASTM) standard E399].

Table 5-1

Values of K_{Ic} for Some
Engineering Materials
at Room Temperature

Material	K_{Ic} , $\text{MPa}\sqrt{\text{m}}$	S_y , MPa
Aluminum		
2024	26	455
7075	24	495
7178	33	490
Titanium		
Ti-6AL-4V	115	910
Ti-6AL-4V	55	1035
Steel		
4340	99	860
4340	60	1515
52100	14	2070

One of the first problems facing the designer is that of deciding whether the conditions exist, or not, for a brittle fracture. Low-temperature operation, that is, operation below room temperature, is a key indicator that brittle fracture is a possible failure mode. Tables of transition temperatures for various materials have not been published, possibly because of the wide variation in values, even for a single material. Thus, in many situations, laboratory testing may give the only clue to the possibility of a brittle fracture. Another key indicator of the possibility of fracture is the ratio of the yield strength to the ultimate strength. A high ratio of S_y/S_u indicates there is only a small ability to absorb energy in the plastic region and hence there is a likelihood of brittle fracture.

The strength-to-stress ratio K_{Ic}/K_I can be used as a factor of safety as

$$n = \frac{K_{Ic}}{K_I} \quad (5-38)$$

EXAMPLE 5-6

A steel ship deck plate is 30 mm thick and 12 m wide. It is loaded with a nominal uniaxial tensile stress of 50 MPa. It is operated below its ductile-to-brittle transition temperature with K_{Ic} equal to 28.3 MPa. If a 65-mm-long central transverse crack is present, estimate the tensile stress at which catastrophic failure will occur. Compare this stress with the yield strength of 240 MPa for this steel.

Solution

For Fig. 5-25, with $d = b$, $2a = 65$ mm and $2b = 12$ m, so that $d/b = 1$ and $a/d = 65/12(10^3) = 0.00542$. Since a/d is so small, $\beta = 1$, so that

$$K_I = \sigma\sqrt{\pi a} = 50\sqrt{\pi(32.5 \times 10^{-3})} = 16.0 \text{ MPa}\sqrt{\text{m}}$$

From Eq. (5-38),

$$n = \frac{K_{Ic}}{K_I} = \frac{28.3}{16.0} = 1.77$$

The stress at which catastrophic failure occurs is

Answer

$$\sigma_c = \frac{K_{Ic}}{K_I} \sigma = \frac{28.3}{16.0} (50) = 88.4 \text{ MPa}$$

The yield strength is 240 MPa, and catastrophic failure occurs at $88.4/240 = 0.37$, or at 37 percent of yield. The factor of safety in this circumstance is $K_{Ic}/K_I = 28.3/16 = 1.77$ and *not* $240/50 = 4.8$.

EXAMPLE 5-7

A plate of width 1.4 m and length 2.8 m is required to support a tensile force in the 2.8-m direction of 4.0 MN. Inspection procedures will detect only through-thickness edge cracks larger than 2.7 mm. The two Ti-6AL-4V alloys in Table 5-1 are being considered for this application, for which the safety factor must be 1.3 and minimum weight is important. Which alloy should be used?

Solution

(a) We elect first to estimate the thickness required to resist yielding. Since $\sigma = P/wt$, we have $t = P/w\sigma$. For the weaker alloy, we have, from Table 5-1, $S_y = 910$ MPa. Thus,

$$\sigma_{\text{all}} = \frac{S_y}{n} = \frac{910}{1.3} = 700 \text{ MPa}$$

Thus

$$t = \frac{P}{w\sigma_{\text{all}}} = \frac{4.0(10)^3}{1.4(700)} = 4.08 \text{ mm or greater}$$

For the stronger alloy, we have, from Table 5-1,

$$\sigma_{\text{all}} = \frac{1035}{1.3} = 796 \text{ MPa}$$

and so the thickness is

Answer

$$t = \frac{P}{w\sigma_{\text{all}}} = \frac{4.0(10)^3}{1.4(796)} = 3.59 \text{ mm or greater}$$

(b) Now let us find the thickness required to prevent crack growth. Using Fig. 5-26, we have

$$\frac{h}{b} = \frac{2.8/2}{1.4} = 1 \quad \frac{a}{b} = \frac{2.7}{1.4(10^3)} = 0.00193$$

Corresponding to these ratios we find from Fig. 5-26 that $\beta \doteq 1.1$, and $K_I = 1.1\sigma\sqrt{\pi a}$.

$$n = \frac{K_{Ic}}{K_I} = \frac{115\sqrt{10^3}}{1.1\sigma\sqrt{\pi a}}, \quad \sigma = \frac{K_{Ic}}{1.1n\sqrt{\pi a}}$$

From Table 5–1, $K_{Ic} = 115 \text{ MPa} \sqrt{\text{m}}$ for the weaker of the two alloys. Solving for σ with $n = 1$ gives the fracture stress

$$\sigma = \frac{115}{1.1\sqrt{\pi(2.7 \times 10^{-3})}} = 1135 \text{ MPa}$$

which is greater than the yield strength of 910 MPa, and so yield strength is the basis for the geometry decision. For the stronger alloy $S_y = 1035 \text{ MPa}$, with $n = 1$ the fracture stress is

$$\sigma = \frac{K_{Ic}}{nK_I} = \frac{55}{1(1.1)\sqrt{\pi(2.7 \times 10^{-3})}} = 542.9 \text{ MPa}$$

which is less than the yield strength of 1035 MPa. The thickness t is

$$t = \frac{P}{w\sigma_{\text{all}}} = \frac{4.0(10^3)}{1.4(542.9/1.3)} = 6.84 \text{ mm or greater}$$

This example shows that the fracture toughness K_{Ic} limits the geometry when the stronger alloy is used, and so a thickness of 6.84 mm or larger is required. When the weaker alloy is used the geometry is limited by the yield strength, giving a thickness of only 4.08 mm or greater. Thus the weaker alloy leads to a thinner and lighter weight choice since the failure modes differ.

5–13 Stochastic Analysis¹²

Reliability is the probability that machine systems and components will perform their intended function satisfactorily without failure. Up to this point, discussion in this chapter has been restricted to deterministic relations between static stress, strength, and the design factor. Stress and strength, however, are statistical in nature and very much tied to the reliability of the stressed component. Consider the probability density functions for stress and strength, σ and S , shown in Fig. 5–31a. The mean values of stress and strength are μ_σ and μ_S , respectively. Here, the “average” factor of safety is

$$\bar{n} = \frac{\mu_S}{\mu_\sigma} \quad (a)$$

The margin of safety for any value of stress σ and strength S is defined as

$$m = S - \sigma \quad (b)$$

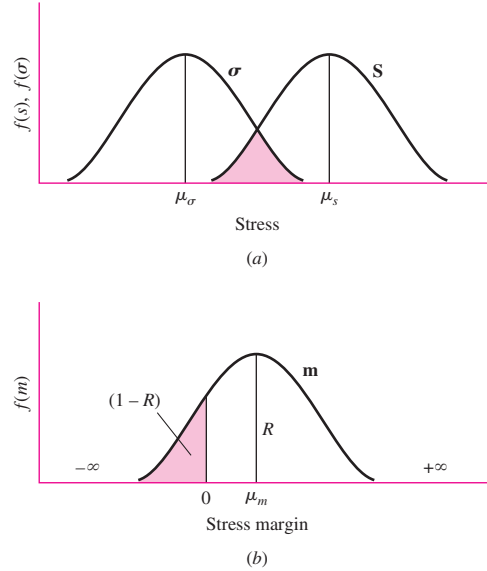
The average part will have a margin of safety of $\bar{m} = \mu_S - \mu_\sigma$. However, for the overlap of the distributions shown by the shaded area in Fig. 5–31a, the stress exceeds the strength, the margin of safety is negative, and these parts are expected to fail. This shaded area is called the *interference* of σ and S .

Figure 5–31b shows the distribution of m , which obviously depends on the distributions of stress and strength. The reliability that a part will perform without failure, R , is the area of the margin of safety distribution for $m > 0$. The interference is the area

¹²Review Chap. 20 before reading this section.

Figure 5-31

Plot of density functions showing how the interference of S and σ is used to obtain the stress margin m . (a) Stress and strength distributions. (b) Distribution of interference; the reliability R is the area of the density function for m greater than zero; the interference is the area $(1 - R)$.



$1 - R$ where parts are expected to fail. We next consider some typical cases involving stress-strength interference.

Normal-Normal Case

Consider the normal distributions, $S = N(\mu_S, \hat{\sigma}_S)$ and $\sigma = N(\mu_\sigma, \hat{\sigma}_\sigma)$. The stress margin is $m = S - \sigma$, and will be normally distributed because the addition or subtraction of normals is normal. Thus $m = N(\mu_m, \hat{\sigma}_m)$. Reliability is the probability p that $m > 0$. That is,

$$R = p(S > \sigma) = p(S - \sigma > 0) = p(m > 0) \quad (5-39)$$

To find the chance that $m > 0$ we form the z variable of m and substitute $m = 0$ [See Eq. (20-16)]. Noting that $\mu_m = \mu_S - \mu_\sigma$ and $\hat{\sigma}_m = (\hat{\sigma}_S^2 + \hat{\sigma}_\sigma^2)^{1/2}$, we write

$$z = \frac{m - \mu_m}{\hat{\sigma}_m} = \frac{0 - \mu_m}{\hat{\sigma}_m} = -\frac{\mu_m}{\hat{\sigma}_m} = -\frac{\mu_S - \mu_\sigma}{(\hat{\sigma}_S^2 + \hat{\sigma}_\sigma^2)^{1/2}} \quad (5-40)$$

Equation (5-40) is called the *normal coupling equation*. The reliability associated with z is given by

$$R = \int_x^\infty \frac{1}{\sqrt{2\pi}} \exp\left(-\frac{u^2}{2}\right) du = 1 - F = 1 - \Phi(z) \quad (5-41)$$

The body of Table A-10 gives R when $z > 0$ and $(1 - R = F)$ when $z \leq 0$. Noting that $\bar{n} = \mu_S/\mu_\sigma$, square both sides of Eq. (5-40), and introduce C_S and C_σ where $C_S = \hat{\sigma}_S/\mu_S$ and $C_\sigma = \hat{\sigma}_\sigma/\mu_\sigma$. Solve the resulting quadratic for \bar{n} to obtain

$$\bar{n} = \frac{1 \pm \sqrt{1 - (1 - z^2 C_S^2)(1 - z^2 C_\sigma^2)}}{1 - z^2 C_S^2} \quad (5-42)$$

The plus sign is associated with $R > 0.5$, and the minus sign with $R < 0.5$.

Lognormal-Lognormal Case

Consider the lognormal distributions $\mathbf{S} = \mathbf{LN}(\mu_S, \hat{\sigma}_S)$ and $\boldsymbol{\sigma} = \mathbf{LN}(\mu_\sigma, \hat{\sigma}_\sigma)$. If we interfere their companion normals using Eqs. (20–18) and (20–19), we obtain

$$\begin{aligned}\mu_{\ln S} &= \ln \mu_S - \ln \sqrt{1 + C_S^2} \\ \hat{\sigma}_{\ln S} &= \sqrt{\ln(1 + C_S^2)}\end{aligned}\quad (\text{strength})$$

and

$$\begin{aligned}\mu_{\ln \sigma} &= \ln \mu_\sigma - \ln \sqrt{1 + C_\sigma^2} \\ \hat{\sigma}_{\ln \sigma} &= \sqrt{\ln(1 + C_\sigma^2)}\end{aligned}\quad (\text{stress})$$

Using Eq. (5–40) for interfering normal distributions gives

$$z = -\frac{\mu_{\ln S} - \mu_{\ln \sigma}}{(\hat{\sigma}_{\ln S}^2 + \hat{\sigma}_{\ln \sigma}^2)^{1/2}} = -\frac{\ln\left(\frac{\mu_S}{\mu_\sigma} \sqrt{\frac{1 + C_\sigma^2}{1 + C_S^2}}\right)}{\sqrt{\ln[(1 + C_S^2)(1 + C_\sigma^2)]}} \quad (5-43)$$

The reliability R is expressed by Eq. (5–41). The design factor \mathbf{n} is the random variable that is the quotient of $\mathbf{S}/\boldsymbol{\sigma}$. The quotient of lognormals is lognormal, so pursuing the z variable of the lognormal \mathbf{n} , we note

$$\mu_n = \frac{\mu_S}{\mu_\sigma} \quad C_n = \sqrt{\frac{C_S^2 + C_\sigma^2}{1 + C_\sigma^2}} \quad \hat{\sigma}_n = C_n \mu_n$$

The companion normal to $\mathbf{n} = \mathbf{LN}(\mu_n, \hat{\sigma}_n)$, from Eqs. (20–18) and (20–19), has a mean and standard deviation of

$$\mu_y = \ln \mu_n - \ln \sqrt{1 + C_n^2} \quad \hat{\sigma}_y = \sqrt{\ln(1 + C_n^2)}$$

The z variable for the companion normal y distribution is

$$z = \frac{y - \mu_y}{\hat{\sigma}_y}$$

Failure will occur when the stress is greater than the strength, when $\bar{n} < 1$, or when $y < 0$.

$$z = \frac{0 - \mu_y}{\hat{\sigma}_y} = -\frac{\mu_y}{\hat{\sigma}_y} = -\frac{\ln \mu_n - \ln \sqrt{1 + C_n^2}}{\sqrt{\ln(1 + C_n^2)}} \doteq -\frac{\ln(\mu_n / \sqrt{1 + C_n^2})}{\sqrt{\ln(1 + C_n^2)}} \quad (5-44)$$

Solving for μ_n gives

$$\mu_n = \bar{n} = \exp\left[-z\sqrt{\ln(1 + C_n^2)} + \ln\sqrt{1 + C_n^2}\right] \doteq \exp\left[C_n\left(-z + \frac{C_n}{2}\right)\right] \quad (5-45)$$

Equations (5–42) and (5–45) are remarkable for several reasons:

- They relate design factor \bar{n} to the reliability goal (through z) and the coefficients of variation of strength and stress.
- They are *not* functions of the means of stress and strength.
- They estimate the design factor necessary to achieve the reliability goal before decisions involving means are made. The C_S depends slightly on the particular material. The C_σ has the coefficient of variation (COV) of the load, and that is generally given.

EXAMPLE 5–8

A round cold-drawn 1018 steel rod has an 0.2 percent yield strength $S_y = N(78.4, 5.90)$ kpsi and is to be subjected to a static axial load of $P = N(50, 4.1)$ kip. What value of the design factor \bar{n} corresponds to a reliability of 0.999 against yielding ($z = -3.09$)? Determine the corresponding diameter of the rod.

Solution $C_S = 5.90/78.4 = 0.0753$, and

$$\sigma = \frac{P}{A} = \frac{4P}{\pi d^2}$$

Since the COV of the diameter is an order of magnitude less than the COV of the load or strength, the diameter is treated deterministically:

$$C_\sigma = C_P = \frac{4.1}{50} = 0.082$$

From Eq. (5–42),

$$\bar{n} = \frac{1 + \sqrt{1 - [1 - (-3.09)^2(0.0753^2)][1 - (-3.09)^2(0.082^2)]}}{1 - (-3.09)^2(0.0753^2)} = 1.416$$

The diameter is found deterministically:

Answer

$$d = \sqrt{\frac{4\bar{P}}{\pi \bar{S}_y / \bar{n}}} = \sqrt{\frac{4(50\,000)}{\pi(78\,400)/1.416}} = 1.072 \text{ in}$$

Check

$S_y = N(78.4, 5.90)$ kpsi, $P = N(50, 4.1)$ kip, and $d = 1.072$ in. Then

$$A = \frac{\pi d^2}{4} = \frac{\pi(1.072^2)}{4} = 0.9026 \text{ in}^2$$

$$\bar{\sigma} = \frac{\bar{P}}{A} = \frac{(50\,000)}{0.9026} = 55\,400 \text{ psi}$$

$$C_P = C_\sigma = \frac{4.1}{50} = 0.082$$

$$\hat{\sigma}_\sigma = C_\sigma \bar{\sigma} = 0.082(55\,400) = 4540 \text{ psi}$$

$$\hat{\sigma}_S = 5.90 \text{ kpsi}$$

From Eq. (5–40)

$$z = -\frac{78.4 - 55.4}{(5.90^2 + 4.54^2)^{1/2}} = -3.09$$

From Appendix Table A–10, $R = \Phi(-3.09) = 0.999$.

EXAMPLE 5-9 Rework Ex. 5-8 with lognormally distributed stress and strength.

Solution $C_S = 5.90/78.4 = 0.0753$, and $C_\sigma = C_P = 4.1/50 = 0.082$. Then

$$\sigma = \frac{\mathbf{P}}{A} = \frac{4\mathbf{P}}{\pi d^2}$$

$$C_n = \sqrt{\frac{C_S^2 + C_\sigma^2}{1 + C_\sigma^2}} = \sqrt{\frac{0.0753^2 + 0.082^2}{1 + 0.082^2}} = 0.1110$$

From Table A-10, $z = -3.09$. From Eq. (5-45),

$$\bar{n} = \exp[-(-3.09)\sqrt{\ln(1 + 0.111^2)} + \ln\sqrt{1 + 0.111^2}] = 1.416$$

$$d = \sqrt{\frac{4\bar{P}}{\pi \bar{S}_y / \bar{n}}} = \sqrt{\frac{4(50\,000)}{\pi(78\,400)/1.416}} = 1.0723 \text{ in}$$

Check $S_y = \text{LN}(78.4, 5.90)$, $\mathbf{P} = \text{LN}(50, 4.1)$ kip. Then

$$A = \frac{\pi d^2}{4} = \frac{\pi(1.0723^2)}{4} = 0.9031$$

$$\bar{\sigma} = \frac{\bar{P}}{A} = \frac{50\,000}{0.9031} = 55\,365 \text{ psi}$$

$$C_\sigma = C_P = \frac{4.1}{50} = 0.082$$

$$\hat{\sigma}_\sigma = C_\sigma \mu_\sigma = 0.082(55\,367) = 4540 \text{ psi}$$

From Eq. (5-43),

$$z = -\frac{\ln\left(\frac{78.4}{55.365} \sqrt{\frac{1 + 0.082^2}{1 + 0.0753^2}}\right)}{\sqrt{\ln[(1 + 0.0753^2)(1 + 0.082^2)]}} = -3.1343$$

Appendix Table A-10 gives $R = 0.99950$.

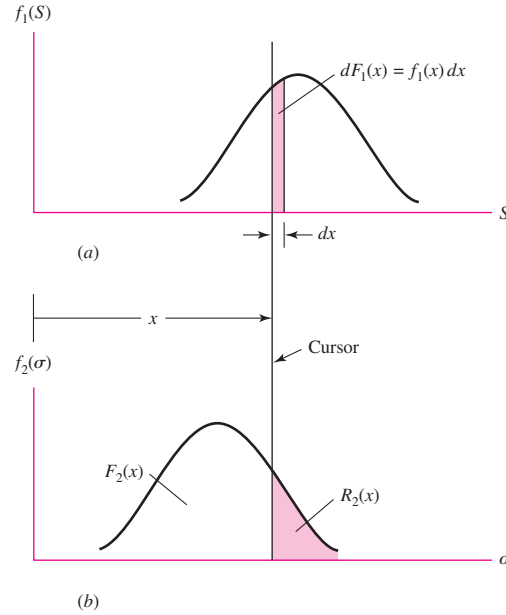
Interference—General

In the previous segments, we employed interference theory to estimate reliability when the distributions are both normal and when they are both lognormal. Sometimes, however, it turns out that the strength has, say, a Weibull distribution while the stress is distributed lognormally. In fact, stresses are quite likely to have a lognormal distribution, because the multiplication of variates that are normally distributed produces a result that approaches lognormal. What all this means is that we must expect to encounter interference problems involving mixed distributions and we need a general method to handle the problem.

It is quite likely that we will use interference theory for problems involving distributions other than strength and stress. For this reason we employ the subscript 1 to

Figure 5–32

(a) PDF of the strength distribution; (b) PDF of the load-induced stress distribution.



designate the strength distribution and the subscript 2 to designate the stress distribution. Figure 5–32 shows these two distributions aligned so that a single cursor x can be used to identify points on both distributions. We can now write

$$\left(\begin{array}{l} \text{Probability that} \\ \text{stress is less} \\ \text{than strength} \end{array} \right) = dp(\sigma < x) = dR = F_2(x) dF_1(x)$$

By substituting $1 - R_2$ for F_2 and $-dR_1$ for dF_1 , we have

$$dR = -[1 - R_2(x)] dR_1(x)$$

The reliability for all possible locations of the cursor is obtained by integrating x from $-\infty$ to ∞ ; but this corresponds to an integration from 1 to 0 on the reliability R_1 . Therefore

$$R = - \int_1^0 [1 - R_2(x)] dR_1(x)$$

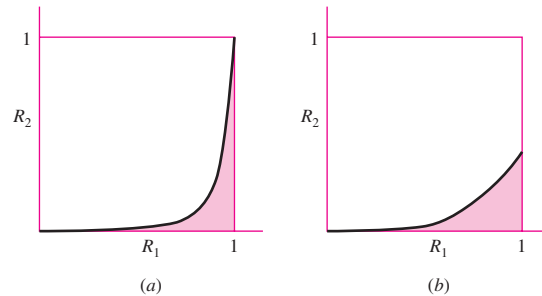
which can be written

$$R = 1 - \int_0^1 R_2 dR_1 \tag{5-46}$$

where

$$R_1(x) = \int_x^\infty f_1(S) dS \tag{5-47}$$

$$R_2(x) = \int_x^\infty f_2(\sigma) d\sigma \tag{5-48}$$

**Figure 5-33**

Curve shapes of the $R_1 R_2$ plot. In each case the shaded area is equal to $1 - R$ and is obtained by numerical integration. (a) Typical curve for asymptotic distributions; (b) curve shape obtained from lower truncated distributions such as the Weibull.

For the usual distributions encountered, plots of R_1 versus R_2 appear as shown in Fig. 5–33. Both of the cases shown are amenable to numerical integration and computer solution. When the reliability is high, the bulk of the integration area is under the right-hand spike of Fig. 5–33a.

5–14 Important Design Equations

The following equations and their locations are provided as a summary.

Maximum Shear Theory

p. 212
$$\tau_{\max} = \frac{\sigma_1 - \sigma_3}{2} = \frac{S_y}{2n} \quad (5-3)$$

Distortion-Energy Theory

Von Mises stress, p. 214

$$\sigma' = \left[\frac{(\sigma_1 - \sigma_2)^2 + (\sigma_2 - \sigma_3)^2 + (\sigma_3 - \sigma_1)^2}{2} \right]^{1/2} \quad (5-12)$$

p. 215
$$\sigma' = \frac{1}{\sqrt{2}} [(\sigma_x - \sigma_y)^2 + (\sigma_y - \sigma_z)^2 + (\sigma_z - \sigma_x)^2 + 6(\tau_{xy}^2 + \tau_{yz}^2 + \tau_{zx}^2)]^{1/2} \quad (5-14)$$

Plane stress, p. 214

$$\sigma' = (\sigma_A^2 - \sigma_A \sigma_B + \sigma_B^2)^{1/2} \quad (5-13)$$

p. 215
$$\sigma' = (\sigma_x^2 - \sigma_x \sigma_y + \sigma_y^2 + 3\tau_{xy}^2)^{1/2} \quad (5-15)$$

Yield design equation, p. 216

$$\sigma' = \frac{S_y}{n} \quad (5-19)$$

Shear yield strength, p. 217

$$S_{sy} = 0.577 S_y \quad (5-21)$$

Coulomb-Mohr Theory

p. 221
$$\frac{\sigma_1}{S_t} - \frac{\sigma_3}{S_c} = \frac{1}{n} \quad (5-26)$$

where S_t is tensile yield (ductile) or ultimate tensile (brittle), and S_c is compressive yield (ductile) or ultimate compressive (brittle) strengths.

Maximum-Normal-Stress Theory

p. 226
$$\sigma_1 = \frac{S_{ut}}{n} \quad \text{or} \quad \sigma_3 = -\frac{S_{uc}}{n} \quad (5-30)$$

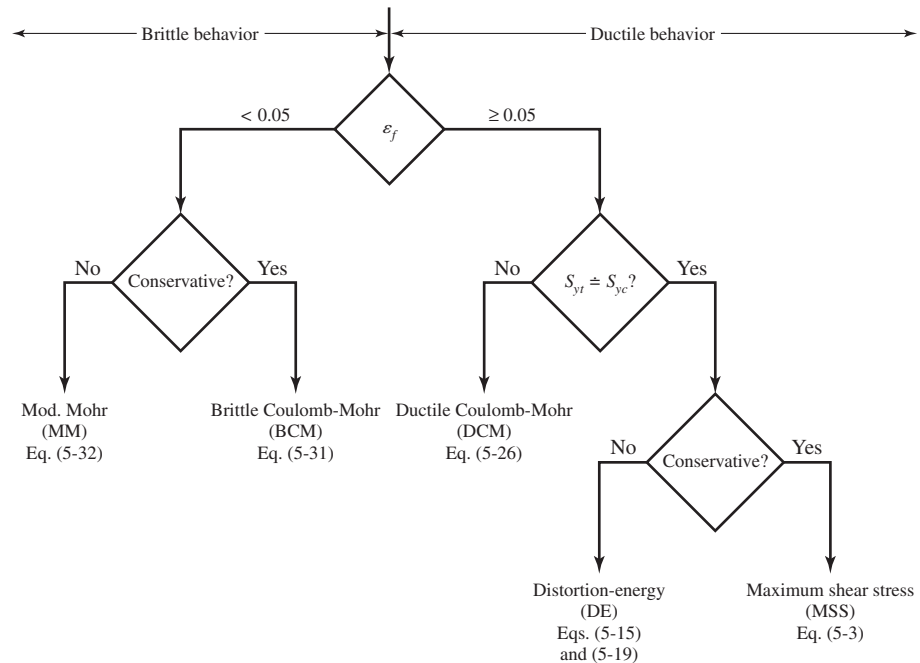
Modified Mohr (Plane Stress)

Use maximum-normal-stress equations, or

p. 227
$$\frac{(S_{uc} - S_{ut})\sigma_A}{S_{uc}S_{ut}} - \frac{\sigma_B}{S_{uc}} = \frac{1}{n} \quad \sigma_A \geq 0 \geq \sigma_B \quad \text{and} \quad \left| \frac{\sigma_B}{\sigma_A} \right| > 1 \quad (5-32b)$$

Failure Theory Flowchart

Fig. 5–21, p. 230



Fracture Mechanics

p. 234
$$K_I = \beta\sigma\sqrt{\pi a} \quad (5-37)$$

where β is found in Figs. 5–25 to 5–30 (pp. 235 to 237)

$$\text{p. 238} \quad n = \frac{K_{Ic}}{K_I} \quad (5-38)$$

where K_{Ic} is found in Table 5–1 (p. 238)

Stochastic Analysis

Mean factor of safety defined as $\bar{n} = \mu_S / \mu_\sigma$ (μ_S and μ_σ are mean strength and stress, respectively)

Normal-Normal Case

$$\text{p. 241} \quad \bar{n} = \frac{1 \pm \sqrt{1 - (1 - z^2 C_s^2)(1 - z^2 C_\sigma^2)}}{1 - z^2 C_s^2} \quad (5-42)$$

where z can be found in Table A–10, $C_s = \hat{\sigma}_S / \mu_S$, and $C_\sigma = \hat{\sigma}_\sigma / \mu_\sigma$.

Lognormal-Lognormal Case

$$\text{p. 242} \quad \bar{n} = \exp \left[-z \sqrt{\ln(1 + C_n^2)} + \ln \sqrt{1 + C_n^2} \right] \doteq \exp \left[C_n \left(-z + \frac{C_n}{2} \right) \right] \quad (5-45)$$

where

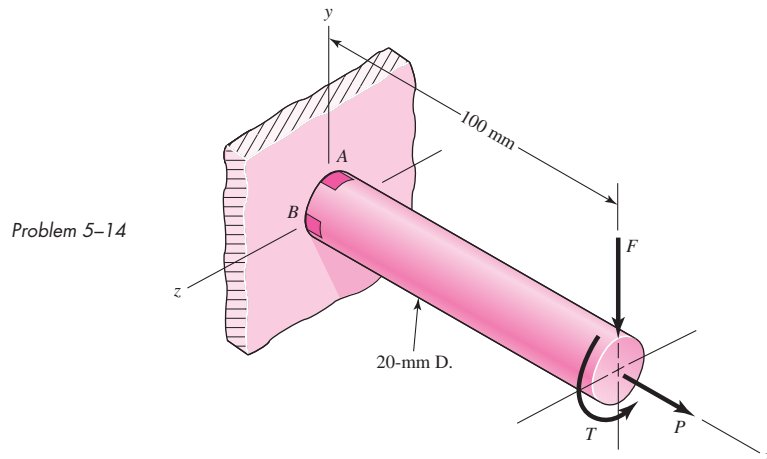
$$C_n = \sqrt{\frac{C_s^2 + C_\sigma^2}{1 + C_\sigma^2}}$$

(See other definitions in normal-normal case.)

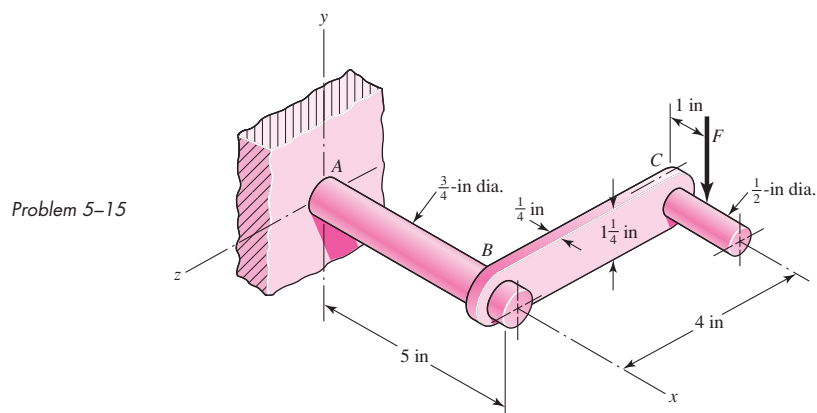
PROBLEMS

- 5-1** A ductile hot-rolled steel bar has a minimum yield strength in tension and compression of 50 kpsi. Using the distortion-energy and maximum-shear-stress theories determine the factors of safety for the following plane stress states:
- $\sigma_x = 12$ kpsi, $\sigma_y = 6$ kpsi
 - $\sigma_x = 12$ kpsi, $\tau_{xy} = -8$ kpsi
 - $\sigma_x = -6$ kpsi, $\sigma_y = -10$ kpsi, $\tau_{xy} = -5$ kpsi
 - $\sigma_x = 12$ kpsi, $\sigma_y = 4$ kpsi, $\tau_{xy} = 1$ kpsi
- 5-2** Repeat Prob. 5–1 for:
- $\sigma_A = 12$ kpsi, $\sigma_B = 12$ kpsi
 - $\sigma_A = 12$ kpsi, $\sigma_B = 6$ kpsi
 - $\sigma_A = 12$ kpsi, $\sigma_B = -12$ kpsi
 - $\sigma_A = -6$ kpsi, $\sigma_B = -12$ kpsi
- 5-3** Repeat Prob. 5–1 for a bar of AISI 1020 cold-drawn steel and:
- $\sigma_x = 180$ MPa, $\sigma_y = 100$ MPa
 - $\sigma_x = 180$ MPa, $\tau_{xy} = 100$ MPa
 - $\sigma_x = -160$ MPa, $\tau_{xy} = 100$ MPa
 - $\tau_{xy} = 150$ MPa
- 5-4** Repeat Prob. 5–1 for a bar of AISI 1018 hot-rolled steel and:
- $\sigma_A = 100$ MPa, $\sigma_B = 80$ MPa
 - $\sigma_A = 100$ MPa, $\sigma_B = 10$ MPa
 - $\sigma_A = 100$ MPa, $\sigma_B = -80$ MPa
 - $\sigma_A = -80$ MPa, $\sigma_B = -100$ MPa

- 5-5** Repeat Prob. 5-3 by first plotting the failure loci in the σ_A, σ_B plane to scale; then, for each stress state, plot the load line and by graphical measurement estimate the factors of safety.
- 5-6** Repeat Prob. 5-4 by first plotting the failure loci in the σ_A, σ_B plane to scale; then, for each stress state, plot the load line and by graphical measurement estimate the factors of safety.
- 5-7** An ASTM cast iron has minimum ultimate strengths of 30 kpsi in tension and 100 kpsi in compression. Find the factors of safety using the MNS, BCM, and MM theories for each of the following stress states. Plot the failure diagrams in the σ_A, σ_B plane to scale and locate the coordinates of each stress state.
- (a) $\sigma_x = 20$ kpsi, $\sigma_y = 6$ kpsi
 (b) $\sigma_x = 12$ kpsi, $\tau_{xy} = -8$ kpsi
 (c) $\sigma_x = -6$ kpsi, $\sigma_y = -10$ kpsi, $\tau_{xy} = -5$ kpsi
 (d) $\sigma_x = -12$ kpsi, $\tau_{xy} = 8$ kpsi
- 5-8** For Prob. 5-7, case (d), estimate the factors of safety from the three theories by graphical measurements of the load line.
- 5-9** Among the decisions a designer must make is selection of the failure criteria that is applicable to the material and its static loading. A 1020 hot-rolled steel has the following properties: $S_y = 42$ kpsi, $S_{ut} = 66.2$ kpsi, and true strain at fracture $\epsilon_f = 0.90$. Plot the failure locus and, for the static stress states at the critical locations listed below, plot the load line and estimate the factor of safety analytically and graphically.
- (a) $\sigma_x = 9$ kpsi, $\sigma_y = -5$ kpsi.
 (b) $\sigma_x = 12$ kpsi, $\tau_{xy} = 3$ kpsi ccw.
 (c) $\sigma_x = -4$ kpsi, $\sigma_y = -9$ kpsi, $\tau_{xy} = 5$ kpsi cw.
 (d) $\sigma_x = 11$ kpsi, $\sigma_y = 4$ kpsi, $\tau_{xy} = 1$ kpsi cw.
- 5-10** A 4142 steel Q&T at 80°F exhibits $S_{yt} = 235$ kpsi, $S_{yc} = 275$ kpsi, and $\epsilon_f = 0.06$. Choose and plot the failure locus and, for the static stresses at the critical locations, which are 10 times those in Prob. 5-9, plot the load lines and estimate the factors of safety analytically and graphically.
- 5-11** For grade 20 cast iron, Table A-24 gives $S_{ut} = 22$ kpsi, $S_{uc} = 83$ kpsi. Choose and plot the failure locus and, for the static loadings inducing the stresses at the critical locations of Prob. 5-9, plot the load lines and estimate the factors of safety analytically and graphically.
- 5-12** A cast aluminum 195-T6 has an ultimate strength in tension of $S_{ut} = 36$ kpsi and ultimate strength in compression of $S_{uc} = 35$ kpsi, and it exhibits a true strain at fracture $\epsilon_f = 0.045$. Choose and plot the failure locus and, for the static loading inducing the stresses at the critical locations of Prob. 5-9, plot the load lines and estimate the factors of safety analytically and graphically.
- 5-13** An ASTM cast iron, grade 30 (see Table A-24), carries static loading resulting in the stress state listed below at the critical locations. Choose the appropriate failure locus, plot it and the load lines, and estimate the factors of safety analytically and graphically.
- (a) $\sigma_A = 20$ kpsi, $\sigma_B = 20$ kpsi.
 (b) $\tau_{xy} = 15$ kpsi.
 (c) $\sigma_A = \sigma_B = -80$ kpsi.
 (d) $\sigma_A = 15$ kpsi, $\sigma_B = -25$ kpsi.
- 5-14** This problem illustrates that the factor of safety for a machine element depends on the particular point selected for analysis. Here you are to compute factors of safety, based upon the distortion-energy theory, for stress elements at A and B of the member shown in the figure. This bar is made of AISI 1006 cold-drawn steel and is loaded by the forces $F = 0.55$ kN, $P = 8.0$ kN, and $T = 30$ N · m.



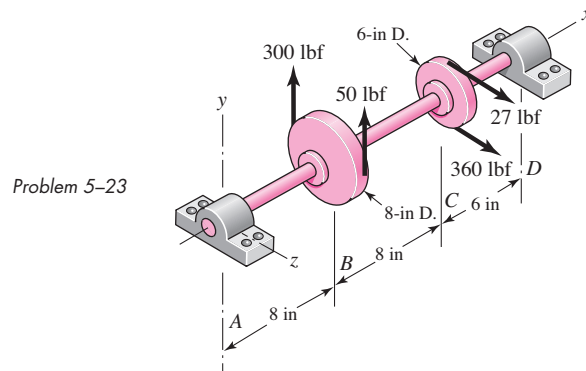
- 5-15** The figure shows a crank loaded by a force $F = 190$ lbf which causes twisting and bending of the $\frac{3}{4}$ -in-diameter shaft fixed to a support at the origin of the reference system. In actuality, the support may be an inertia which we wish to rotate, but for the purposes of a strength analysis we can consider this to be a statics problem. The material of the shaft AB is hot-rolled AISI 1018 steel (Table A-20). Using the maximum-shear-stress theory, find the factor of safety based on the stress at point A .



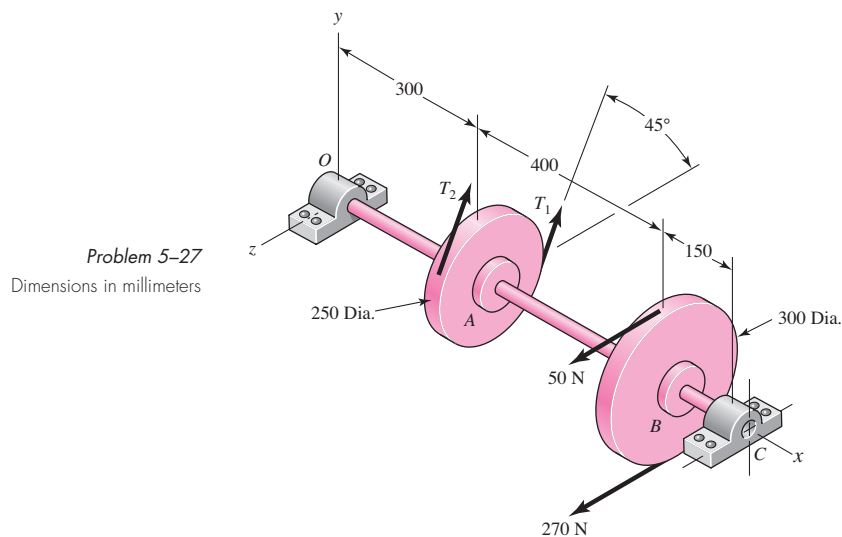
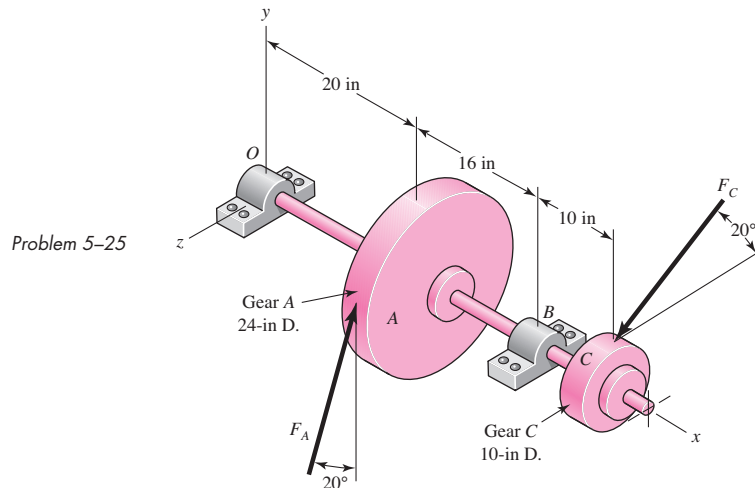
- 5-16** Solve Prob. 5-15 using the distortion energy theory. If you have solved Prob. 5-15, compare the results and discuss the difference.
- 5-17*** Design the lever arm CD of Fig. 5-16 by specifying a suitable size and material.
- 5-18** A spherical pressure vessel is formed of 18-gauge (0.05-in) cold-drawn AISI 1018 sheet steel. If the vessel has a diameter of 8 in, estimate the pressure necessary to initiate yielding. What is the estimated bursting pressure?

*The asterisk indicates a problem that may not have a unique result or may be a particularly challenging problem.

- 5-19** This problem illustrates that the strength of a machine part can sometimes be measured in units other than those of force or moment. For example, the maximum speed that a flywheel can reach without yielding or fracturing is a measure of its strength. In this problem you have a rotating ring made of hot-forged AISI 1020 steel; the ring has a 6-in inside diameter and a 10-in outside diameter and is 1.5 in thick. What speed in revolutions per minute would cause the ring to yield? At what radius would yielding begin? [Note: The maximum radial stress occurs at $r = (r_o r_i)^{1/2}$; see Eq. (3-55).]
- 5-20** A light pressure vessel is made of 2024-T3 aluminum alloy tubing with suitable end closures. This cylinder has a $3\frac{1}{2}$ -in OD, a 0.065-in wall thickness, and $\nu = 0.334$. The purchase order specifies a minimum yield strength of 46 kpsi. What is the factor of safety if the pressure-release valve is set at 500 psi?
- 5-21** A cold-drawn AISI 1015 steel tube is 300 mm OD by 200 mm ID and is to be subjected to an external pressure caused by a shrink fit. What maximum pressure would cause the material of the tube to yield?
- 5-22** What speed would cause fracture of the ring of Prob. 5-19 if it were made of grade 30 cast iron?
- 5-23** The figure shows a shaft mounted in bearings at *A* and *D* and having pulleys at *B* and *C*. The forces shown acting on the pulley surfaces represent the belt tensions. The shaft is to be made of ASTM grade 25 cast iron using a design factor $n_d = 2.8$. What diameter should be used for the shaft?



- 5-24** By modern standards, the shaft design of Prob. 5-23 is poor because it is so long. Suppose it is redesigned by halving the length dimensions. Using the same material and design factor as in Prob. 5-23, find the new shaft diameter.
- 5-25** The gear forces shown act in planes parallel to the yz plane. The force on gear *A* is 300 lbf. Consider the bearings at *O* and *B* to be simple supports. For a static analysis and a factor of safety of 3.5, use distortion energy to determine the minimum safe diameter of the shaft. Consider the material to have a yield strength of 60 kpsi.
- 5-26** Repeat Prob. 5-25 using maximum-shear-stress.
- 5-27** The figure is a schematic drawing of a countershaft that supports two V-belt pulleys. For each pulley, the belt tensions are parallel. For pulley *A* consider the loose belt tension is 15 percent of the tension on the tight side. A cold-drawn UNS G10180 steel shaft of uniform diameter is to be selected for this application. For a static analysis with a factor of safety of 3.0, determine the minimum preferred size diameter. Use the distortion-energy theory.

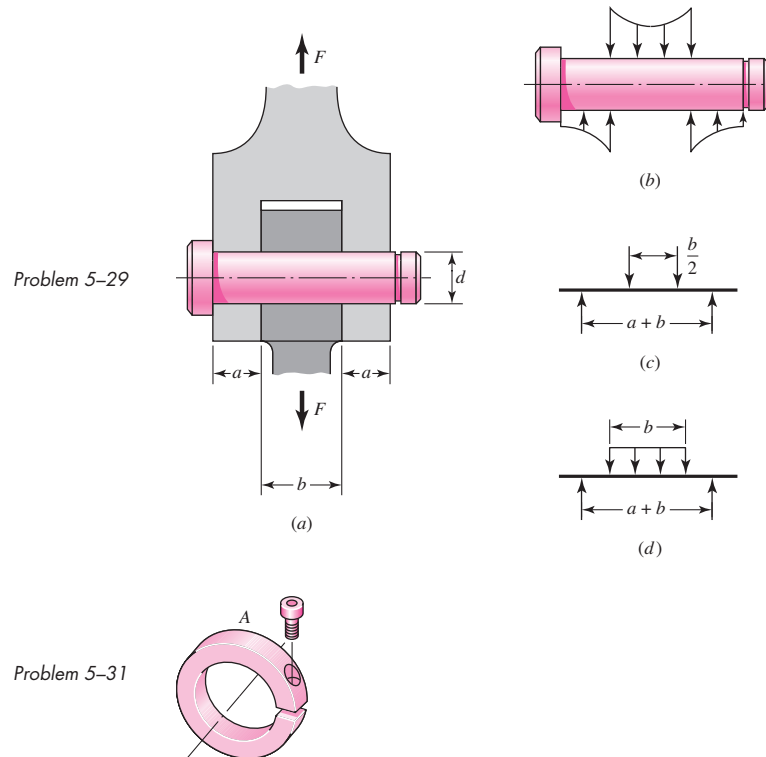


5–28 Repeat Prob. 5–27 using maximum shear stress.

5–29 The clevis pin shown in the figure is 12 mm in diameter and has the dimensions $a = 12$ mm and $b = 18$ mm. The pin is machined from AISI 1018 hot-rolled steel (Table A–20) and is to be loaded to no more than 4.4 kN. Determine whether or not the assumed loading of figure *c* yields a factor of safety any different from that of figure *d*. Use the maximum-shear-stress theory.

5–30 Repeat Prob. 5–29, but this time use the distortion-energy theory.

5–31 A split-ring clamp-type shaft collar is shown in the figure. The collar is 2 in OD by 1 in ID by $\frac{1}{2}$ in wide. The screw is designated as $\frac{1}{4}$ -28 UNF. The relation between the screw tightening torque T , the nominal screw diameter d , and the tension in the screw F_i is approximately $T = 0.2 F_i d$. The shaft is sized to obtain a close running fit. Find the axial holding force F_x of the collar as a function of the coefficient of friction and the screw torque.



- 5-32** Suppose the collar of Prob. 5-31 is tightened by using a screw torque of 190 lbf · in. The collar material is AISI 1040 steel heat-treated to a minimum tensile yield strength of 63 kpsi.
- Estimate the tension in the screw.
 - By relating the tangential stress to the hoop tension, find the internal pressure of the shaft on the ring.
 - Find the tangential and radial stresses in the ring at the inner surface.
 - Determine the maximum shear stress and the von Mises stress.
 - What are the factors of safety based on the maximum-shear-stress hypothesis and the distortion-energy theory?

- 5-33** In Prob. 5-31, the role of the screw was to induce the hoop tension that produces the clamping. The screw should be placed so that no moment is induced in the ring. Just where should the screw be located?

- 5-34** A tube has another tube shrunk over it. The specifications are:

	Inner Member	Outer Member
ID	1.000 ± 0.002 in	1.999 ± 0.0004 in
OD	2.000 ± 0.0004 in	3.000 ± 0.004 in

Both tubes are made of a plain carbon steel.

- Find the nominal shrink-fit pressure and the von Mises stresses at the fit surface.
- If the inner tube is changed to solid shafting with the same outside dimensions, find the nominal shrink-fit pressure and the von Mises stresses at the fit surface.

5–35 Steel tubes with a Young's modulus of 207 GPa have the specifications:

	Inner Tube	Outer Tube
ID	25 ± 0.050 mm	49.98 ± 0.010 mm
OD	50 ± 0.010 mm	75 ± 0.10 mm

These are shrink-fitted together. Find the nominal shrink-fit pressure and the von Mises stress in each body at the fit surface.

5–36 Repeat Prob. 5–35 for maximum shrink-fit conditions.

5–37 A 2-in-diameter solid steel shaft has a gear with ASTM grade 20 cast-iron hub ($E = 14.5$ Mpsi) shrink-fitted to it. The specifications for the shaft are

$$\begin{array}{r} 2.000 \\ + 0.0000 \\ - 0.0004 \end{array} \text{ in}$$

The hole in the hub is sized at 1.999 ± 0.0004 in with an OD of $4.00 \pm \frac{1}{32}$ in. Using the midrange values and the modified Mohr theory, estimate the factor of safety guarding against fracture in the gear hub due to the shrink fit.

5–38 Two steel tubes are shrink-fitted together where the nominal diameters are 1.50, 1.75, and 2.00 in. Careful measurement before fitting revealed that the diametral interference between the tubes to be 0.00246 in. After the fit, the assembly is subjected to a torque of 8000 lbf · in and a bending-moment of 6000 lbf · in. Assuming no slipping between the cylinders, analyze the outer cylinder at the inner and outer radius. Determine the factor of safety using distortion energy with $S_y = 60$ kpsi.

5–39 Repeat Prob. 5–38 for the inner tube.

5–40 For Eqs. (5–36) show that the principal stresses are given by

$$\begin{aligned} \sigma_1 &= \frac{K_I}{\sqrt{2\pi r}} \cos \frac{\theta}{2} \left(1 + \sin \frac{\theta}{2} \right) \\ \sigma_2 &= \frac{K_I}{\sqrt{2\pi r}} \cos \frac{\theta}{2} \left(1 - \sin \frac{\theta}{2} \right) \\ \sigma_3 &= \begin{cases} 0 & \text{(plane stress)} \\ \sqrt{\frac{2}{\pi r}} \nu K_I \cos \frac{\theta}{2} & \text{(plane strain)} \end{cases} \end{aligned}$$

5–41 Use the results of Prob. 5–40 for plane strain near the tip with $\theta = 0$ and $\nu = \frac{1}{3}$. If the yield strength of the plate is S_y , what is σ_1 when yield occurs?

(a) Use the distortion-energy theory.

(b) Use the maximum-shear-stress theory. Using Mohr's circles, explain your answer.

5–42 A plate 4 in wide, 8 in long, and 0.5 in thick is loaded in tension in the direction of the length. The plate contains a crack as shown in Fig. 5–26 with the crack length of 0.625 in. The material is steel with $K_{Ic} = 70$ kpsi · $\sqrt{\text{in}}$, and $S_y = 160$ kpsi. Determine the maximum possible load that can be applied before the plate (a) yields, and (b) has uncontrollable crack growth.

5–43 A cylinder subjected to internal pressure p_i has an outer diameter of 350 mm and a 25-mm wall thickness. For the cylinder material, $K_{Ic} = 80$ MPa · $\sqrt{\text{m}}$, $S_y = 1200$ MPa, and $S_{ut} = 1350$ MPa.

If the cylinder contains a radial crack in the longitudinal direction of depth 12.5 mm determine the pressure that will cause uncontrollable crack growth.

- 5-44** A carbon steel collar of length 1 in is to be machined to inside and outside diameters, respectively, of

$$D_i = 0.750 \pm 0.0004 \text{ in} \quad D_o = 1.125 \pm 0.002 \text{ in}$$

This collar is to be shrink-fitted to a hollow steel shaft having inside and outside diameters, respectively, of

$$d_i = 0.375 \pm 0.002 \text{ in} \quad d_o = 0.752 \pm 0.0004 \text{ in}$$

These tolerances are assumed to have a normal distribution, to be centered in the spread interval, and to have a total spread of ± 4 standard deviations. Determine the means and the standard deviations of the tangential stress components for both cylinders at the interface.

- 5-45** Suppose the collar of Prob. 5-44 has a yield strength of $S_y = N(95.5, 6.59)$ kpsi. What is the probability that the material will not yield?

- 5-46** A carbon steel tube has an outside diameter of 1 in and a wall thickness of $\frac{1}{8}$ in. The tube is to carry an internal hydraulic pressure given as $p = N(6000, 500)$ psi. The material of the tube has a yield strength of $S_y = N(50, 4.1)$ kpsi. Find the reliability using thin-wall theory.



Fatigue Failure Resulting from Variable Loading

Chapter Outline

6-1	Introduction to Fatigue in Metals	258
6-2	Approach to Fatigue Failure in Analysis and Design	264
6-3	Fatigue-Life Methods	265
6-4	The Stress-Life Method	265
6-5	The Strain-Life Method	268
6-6	The Linear-Elastic Fracture Mechanics Method	270
6-7	The Endurance Limit	274
6-8	Fatigue Strength	275
6-9	Endurance Limit Modifying Factors	278
6-10	Stress Concentration and Notch Sensitivity	287
6-11	Characterizing Fluctuating Stresses	292
6-12	Fatigue Failure Criteria for Fluctuating Stress	295
6-13	Torsional Fatigue Strength under Fluctuating Stresses	309
6-14	Combinations of Loading Modes	309
6-15	Varying, Fluctuating Stresses; Cumulative Fatigue Damage	313
6-16	Surface Fatigue Strength	319
6-17	Stochastic Analysis	322
6-18	Road Maps and Important Design Equations for the Stress-Life Method	336

In Chap. 5 we considered the analysis and design of parts subjected to static loading. The behavior of machine parts is entirely different when they are subjected to time-varying loading. In this chapter we shall examine how parts fail under variable loading and how to proportion them to successfully resist such conditions.

6-1 Introduction to Fatigue in Metals

In most testing of those properties of materials that relate to the stress-strain diagram, the load is applied gradually, to give sufficient time for the strain to fully develop. Furthermore, the specimen is tested to destruction, and so the stresses are applied only once. Testing of this kind is applicable, to what are known as *static conditions*; such conditions closely approximate the actual conditions to which many structural and machine members are subjected.

The condition frequently arises, however, in which the stresses vary with time or they fluctuate between different levels. For example, a particular fiber on the surface of a rotating shaft subjected to the action of bending loads undergoes both tension and compression for each revolution of the shaft. If the shaft is part of an electric motor rotating at 1725 rev/min, the fiber is stressed in tension and compression 1725 times each minute. If, in addition, the shaft is also axially loaded (as it would be, for example, by a helical or worm gear), an axial component of stress is superposed upon the bending component. In this case, some stress is always present in any one fiber, but now the *level* of stress is fluctuating. These and other kinds of loading occurring in machine members produce stresses that are called *variable, repeated, alternating, or fluctuating stresses*.

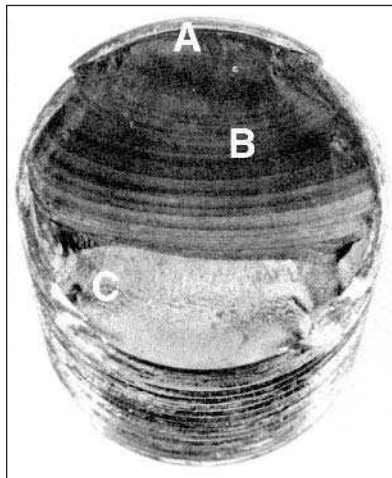
Often, machine members are found to have failed under the action of repeated or fluctuating stresses; yet the most careful analysis reveals that the actual maximum stresses were well below the ultimate strength of the material, and quite frequently even below the yield strength. The most distinguishing characteristic of these failures is that the stresses have been repeated a very large number of times. Hence the failure is called a *fatigue failure*.

When machine parts fail statically, they usually develop a very large deflection, because the stress has exceeded the yield strength, and the part is replaced before fracture actually occurs. Thus many static failures give visible warning in advance. But a fatigue failure gives no warning! It is sudden and total, and hence dangerous. It is relatively simple to design against a static failure, because our knowledge is comprehensive. Fatigue is a much more complicated phenomenon, only partially understood, and the engineer seeking competence must acquire as much knowledge of the subject as possible.

A fatigue failure has an appearance similar to a brittle fracture, as the fracture surfaces are flat and perpendicular to the stress axis with the absence of necking. The fracture features of a fatigue failure, however, are quite different from a static brittle fracture arising from three stages of development. *Stage I* is the initiation of one or more microcracks due to cyclic plastic deformation followed by crystallographic propagation extending from two to five grains about the origin. Stage I cracks are not normally discernible to the naked eye. *Stage II* progresses from microcracks to macrocracks forming parallel plateau-like fracture surfaces separated by longitudinal ridges. The plateaus are generally smooth and normal to the direction of maximum tensile stress. These surfaces can be wavy dark and light bands referred to as *beach marks* or *clamshell marks*, as seen in Fig. 6-1. During cyclic loading, these cracked surfaces open and close, rubbing together, and the beach mark appearance depends on the changes in the level or frequency of loading and the corrosive nature of the environment. *Stage III* occurs during the final stress cycle when the remaining material cannot support the loads, resulting in

Figure 6-1

Fatigue failure of a bolt due to repeated unidirectional bending. The failure started at the thread root at A, propagated across most of the cross section shown by the beach marks at B, before final fast fracture at C. (From ASM Handbook, Vol. 12: Fractography, ASM International, Materials Park, OH 44073-0002, fig 50, p. 120. Reprinted by permission of ASM International®, www.asminternational.org.)



a sudden, fast fracture. A stage III fracture can be brittle, ductile, or a combination of both. Quite often the beach marks, if they exist, and possible patterns in the stage III fracture called *chevron lines*, point toward the origins of the initial cracks.

There is a good deal to be learned from the fracture patterns of a fatigue failure.¹ Figure 6-2 shows representations of failure surfaces of various part geometries under differing load conditions and levels of stress concentration. Note that, in the case of rotational bending, even the direction of rotation influences the failure pattern.

Fatigue failure is due to crack formation and propagation. A fatigue crack will typically initiate at a discontinuity in the material where the cyclic stress is a maximum. Discontinuities can arise because of:

- Design of rapid changes in cross section, keyways, holes, etc. where stress concentrations occur as discussed in Secs. 3-13 and 5-2.
- Elements that roll and/or slide against each other (bearings, gears, cams, etc.) under high contact pressure, developing concentrated subsurface contact stresses (Sec. 3-19) that can cause surface pitting or spalling after many cycles of the load.
- Carelessness in locations of stamp marks, tool marks, scratches, and burrs; poor joint design; improper assembly; and other fabrication faults.
- Composition of the material itself as processed by rolling, forging, casting, extrusion, drawing, heat treatment, etc. Microscopic and submicroscopic surface and subsurface discontinuities arise, such as inclusions of foreign material, alloy segregation, voids, hard precipitated particles, and crystal discontinuities.


Various conditions that can accelerate crack initiation include residual tensile stresses, elevated temperatures, temperature cycling, a corrosive environment, and high-frequency cycling.

The rate and direction of fatigue crack propagation is primarily controlled by localized stresses and by the structure of the material at the crack. However, as with crack formation, other factors may exert a significant influence, such as environment, temperature, and frequency. As stated earlier, cracks will grow along planes normal to the

¹See the ASM Handbook, *Fractography*, ASM International, Metals Park, Ohio, vol. 12, 9th ed., 1987.

Figure 6-2

Schematics of fatigue fracture surfaces produced in smooth and notched components with round and rectangular cross sections under various loading conditions and nominal stress levels. (From *ASM Handbook, Vol. 11: Failure Analysis and Prevention*, ASM International, Materials Park, OH 44073-0002, fig 18, p. 111. Reprinted by permission of ASM International®, www.asminternational.org.)



maximum tensile stresses. The crack growth process can be explained by fracture mechanics (see Sec. 6–6).

A major reference source in the study of fatigue failure is the 21-volume *ASM Metals Handbook*. Figures 6–1 to 6–8, reproduced with permission from ASM International, are but a minuscule sample of examples of fatigue failures for a great variety of conditions included in the handbook. Comparing Fig. 6–3 with Fig. 6–2, we see that failure occurred by rotating bending stresses, with the direction of rotation being clockwise with respect to the view and with a mild stress concentration and low nominal stress.

Figure 6–3

Fatigue fracture of an AISI 4320 drive shaft. The fatigue failure initiated at the end of the keyway at points *B* and progressed to final rupture at *C*. The final rupture zone is small, indicating that loads were low. (From ASM Handbook, Vol. 11: Failure Analysis and Prevention, ASM International, Materials Park, OH 44073-0002, fig 18, p. 111. Reprinted by permission of ASM International®, www.asminternational.org.)



Figure 6–4

Fatigue fracture surface of an AISI 8640 pin. Sharp corners of the mismatched grease holes provided stress concentrations that initiated two fatigue cracks indicated by the arrows. (From ASM Handbook, Vol. 12: Fractography, ASM International, Materials Park, OH 44073-0002, fig 520, p. 331. Reprinted by permission of ASM International®, www.asminternational.org.)

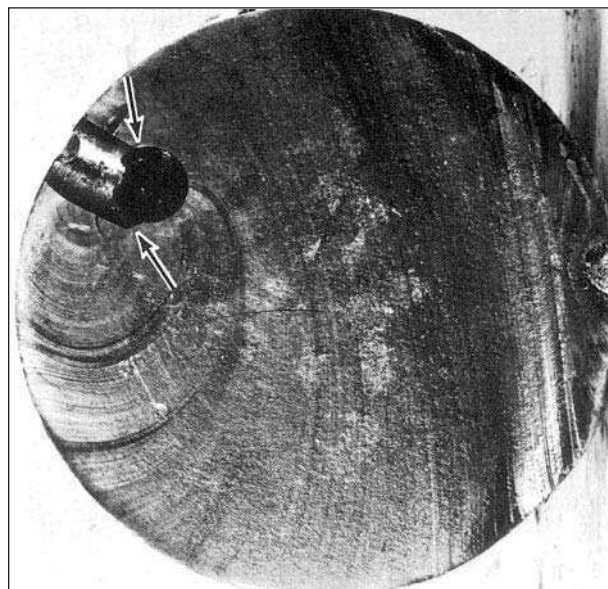
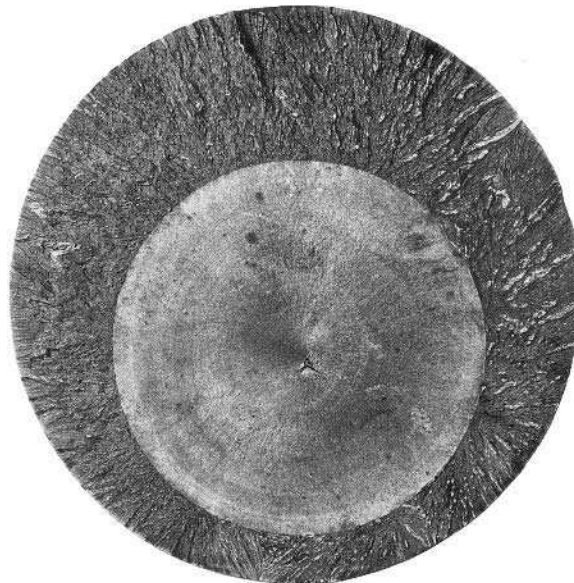
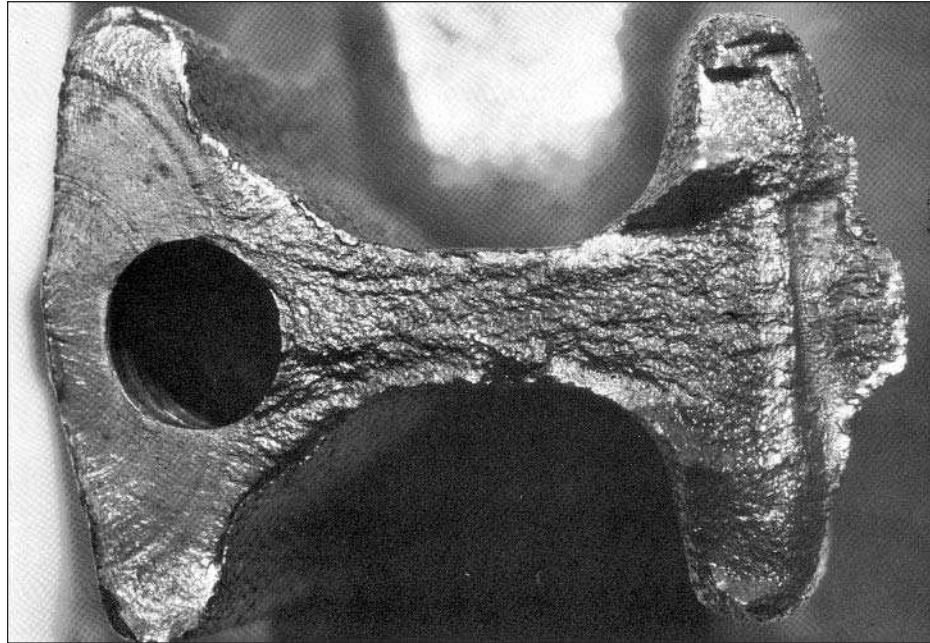
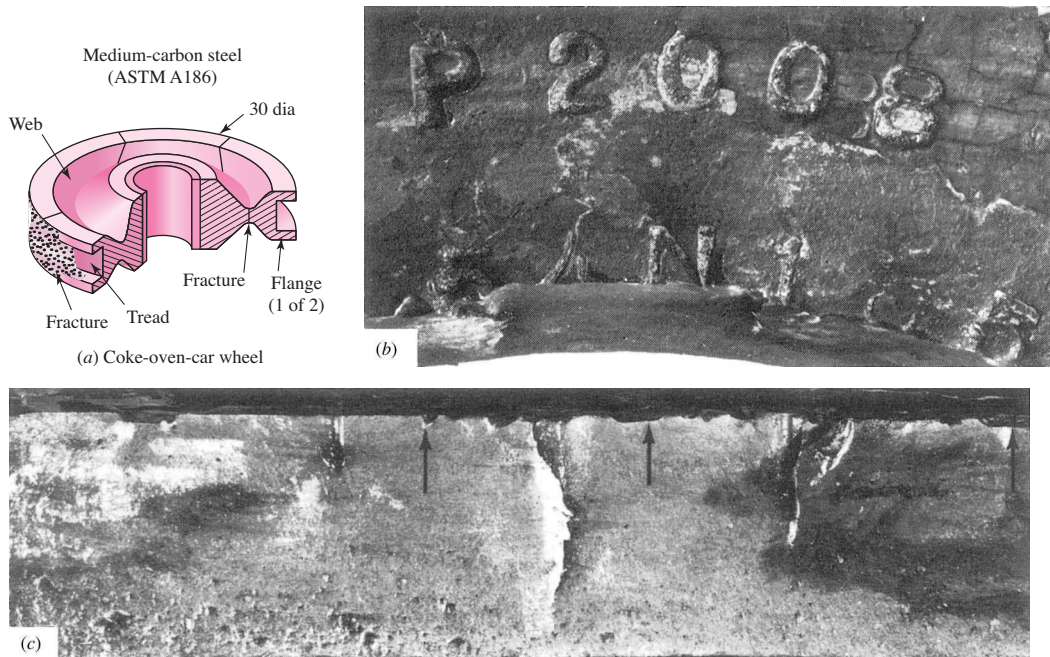


Figure 6-5

Fatigue fracture surface of a forged connecting rod of AISI 8640 steel. The fatigue crack origin is at the left edge, at the flash line of the forging, but no unusual roughness of the flash trim was indicated. The fatigue crack progressed halfway around the oil hole at the left, indicated by the beach marks, before final fast fracture occurred. Note the pronounced shear lip in the final fracture at the right edge. (From ASM Handbook, Vol. 12: Fractography, ASM International, Materials Park, OH 44073-0002, fig 523, p. 332. Reprinted by permission of ASM International®, www.asminternational.org.)

**Figure 6-6**


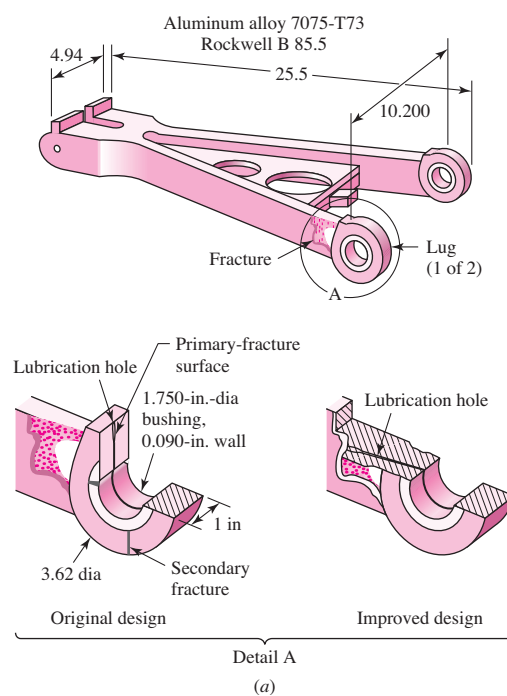
Fatigue fracture surface of a 200-mm (8-in) diameter piston rod of an alloy steel steam hammer used for forging. This is an example of a fatigue fracture caused by pure tension where surface stress concentrations are absent and a crack may initiate anywhere in the cross section. In this instance, the initial crack formed at a forging flake slightly below center, grew outward symmetrically, and ultimately produced a brittle fracture without warning. (From ASM Handbook, Vol. 12: Fractography, ASM International, Materials Park, OH 44073-0002, fig 570, p. 342. Reprinted by permission of ASM International®, www.asminternational.org.)

**Figure 6-7**

Fatigue failure of an ASTM A186 steel double-flange trailer wheel caused by stamp marks. (a) Coke-oven car wheel showing position of stamp marks and fractures in the rib and web. (b) Stamp mark showing heavy impression and fracture extending along the base of the lower row of numbers. (c) Notches, indicated by arrows, created from the heavily indented stamp marks from which cracks initiated along the top at the fracture surface. (From ASM Handbook, Vol. 11: Failure Analysis and Prevention, ASM International, Materials Park, OH 44073-0002, fig 51, p. 130. Reprinted by permission of ASM International®, www.asminternational.org.)

Figure 6-8

Aluminum alloy 7075-T73 landing-gear torque-arm assembly redesign to eliminate fatigue fracture at a lubrication hole. (a) Arm configuration, original and improved design (dimensions given in inches). (b) Fracture surface where arrows indicate multiple crack origins. (From ASM Handbook, Vol. 11: Failure Analysis and Prevention, ASM International, Materials Park, OH 44073-0002, fig 23, p. 114. Reprinted by permission of ASM International®, www.asminternational.org.)



6-2 Approach to Fatigue Failure in Analysis and Design

As noted in the previous section, there are a great many factors to be considered, even for very simple load cases. The methods of fatigue failure analysis represent a combination of engineering and science. Often science fails to provide the complete answers that are needed. But the airplane must still be made to fly—safely. And the automobile must be manufactured with a reliability that will ensure a long and troublefree life and at the same time produce profits for the stockholders of the industry. Thus, while science has not yet completely explained the complete mechanism of fatigue, the engineer must still design things that will not fail. In a sense this is a classic example of the true meaning of engineering as contrasted with science. Engineers use science to solve their problems if the science is available. But available or not, the problem must be solved, and whatever form the solution takes under these conditions is called *engineering*.

In this chapter, we will take a structured approach in the design against fatigue failure. As with static failure, we will attempt to relate to test results performed on simply loaded specimens. However, because of the complex nature of fatigue, there is much more to account for. From this point, we will proceed methodically, and in stages. In an attempt to provide some insight as to what follows in this chapter, a brief description of the remaining sections will be given here.

Fatigue-Life Methods (Secs. 6-3 to 6-6)

Three major approaches used in design and analysis to predict when, if ever, a cyclically loaded machine component will fail in fatigue over a period of time are presented. The premises of each approach are quite different but each adds to our understanding of the mechanisms associated with fatigue. The application, advantages, and disadvantages of each method are indicated. Beyond Sec. 6-6, only one of the methods, the stress-life method, will be pursued for further design applications.

Fatigue Strength and the Endurance Limit (Secs. 6-7 and 6-8)

The strength-life (S - N) diagram provides the fatigue strength S_f versus cycle life N of a material. The results are generated from tests using a simple loading of standard laboratory-controlled specimens. The loading often is that of sinusoidally reversing pure bending. The laboratory-controlled specimens are polished without geometric stress concentration at the region of minimum area.

For steel and iron, the S - N diagram becomes horizontal at some point. The strength at this point is called the *endurance limit* S'_e and occurs somewhere between 10^6 and 10^7 cycles. The prime mark on S'_e refers to the endurance limit of the *controlled laboratory specimen*. For nonferrous materials that do not exhibit an endurance limit, a fatigue strength at a specific number of cycles, S'_f , may be given, where again, the prime denotes the fatigue strength of the laboratory-controlled specimen.

The strength data are based on many controlled conditions that will not be the same as that for an actual machine part. What follows are practices used to account for the differences between the loading and physical conditions of the specimen and the actual machine part.

Endurance Limit Modifying Factors (Sec. 6-9)

Modifying factors are defined and used to account for differences between the specimen and the actual machine part with regard to surface conditions, size, loading, temperature, reliability, and miscellaneous factors. Loading is still considered to be simple and reversing.

Stress Concentration and Notch Sensitivity (Sec. 6–10)

The actual part may have a geometric stress concentration by which the fatigue behavior depends on the static stress concentration factor and the component material's sensitivity to fatigue damage.

Fluctuating Stresses (Secs. 6–11 to 6–13)

These sections account for simple stress states from fluctuating load conditions that are not purely sinusoidally reversing axial, bending, or torsional stresses.

Combinations of Loading Modes (Sec. 6–14)

Here a procedure based on the distortion-energy theory is presented for analyzing combined fluctuating stress states, such as combined bending and torsion. Here it is assumed that the levels of the fluctuating stresses are in phase and not time varying.

Varying, Fluctuating Stresses; Cumulative Fatigue Damage (Sec. 6–15)

The fluctuating stress levels on a machine part may be time varying. Methods are provided to assess the fatigue damage on a cumulative basis.

Remaining Sections

The remaining three sections of the chapter pertain to the special topics of surface fatigue strength, stochastic analysis, and roadmaps with important equations.

6–3 Fatigue-Life Methods

The three major fatigue life methods used in design and analysis are the *stress-life method*, the *strain-life method*, and the *linear-elastic fracture mechanics method*. These methods attempt to predict the life in number of cycles to failure, N , for a specific level of loading. Life of $1 \leq N \leq 10^3$ cycles is generally classified as *low-cycle fatigue*, whereas *high-cycle fatigue* is considered to be $N > 10^3$ cycles. The stress-life method, based on stress levels only, is the least accurate approach, especially for low-cycle applications. However, it is the most traditional method, since it is the easiest to implement for a wide range of design applications, has ample supporting data, and represents high-cycle applications adequately.

The strain-life method involves more detailed analysis of the plastic deformation at localized regions where the stresses and strains are considered for life estimates. This method is especially good for low-cycle fatigue applications. In applying this method, several idealizations must be compounded, and so some uncertainties will exist in the results. For this reason, it will be discussed only because of its value in adding to the understanding of the nature of fatigue.

The fracture mechanics method assumes a crack is already present and detected. It is then employed to predict crack growth with respect to stress intensity. It is most practical when applied to large structures in conjunction with computer codes and a periodic inspection program.

6–4 The Stress-Life Method

To determine the strength of materials under the action of fatigue loads, specimens are subjected to repeated or varying forces of specified magnitudes while the cycles or stress reversals are counted to destruction. The most widely used fatigue-testing device

is the R. R. Moore high-speed rotating-beam machine. This machine subjects the specimen to pure bending (no transverse shear) by means of weights. The specimen, shown in Fig. 6–9, is very carefully machined and polished, with a final polishing in an axial direction to avoid circumferential scratches. Other fatigue-testing machines are available for applying fluctuating or reversed axial stresses, torsional stresses, or combined stresses to the test specimens.

To establish the fatigue strength of a material, quite a number of tests are necessary because of the statistical nature of fatigue. For the rotating-beam test, a constant bending load is applied, and the number of revolutions (stress reversals) of the beam required for failure is recorded. The first test is made at a stress that is somewhat under the ultimate strength of the material. The second test is made at a stress that is less than that used in the first. This process is continued, and the results are plotted as an S - N diagram (Fig. 6–10). This chart may be plotted on semilog paper or on log-log paper. In the case of ferrous metals and alloys, the graph becomes horizontal after the material has been stressed for a certain number of cycles. Plotting on log paper emphasizes the bend in the curve, which might not be apparent if the results were plotted by using Cartesian coordinates.

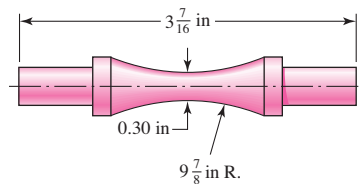


Figure 6–9

Test-specimen geometry for the R. R. Moore rotating-beam machine. The bending moment is uniform over the curved at the highest-stressed portion, a valid test of material, whereas a fracture elsewhere (not at the highest-stress level) is grounds for suspicion of material flaw.

Figure 6–10

An S - N diagram plotted from the results of completely reversed axial fatigue tests. Material: UNS G41300 steel, normalized; $S_{ut} = 116$ kpsi; maximum $S_{ut} = 125$ kpsi. (Data from NACA Tech. Note 3866, December 1966.)

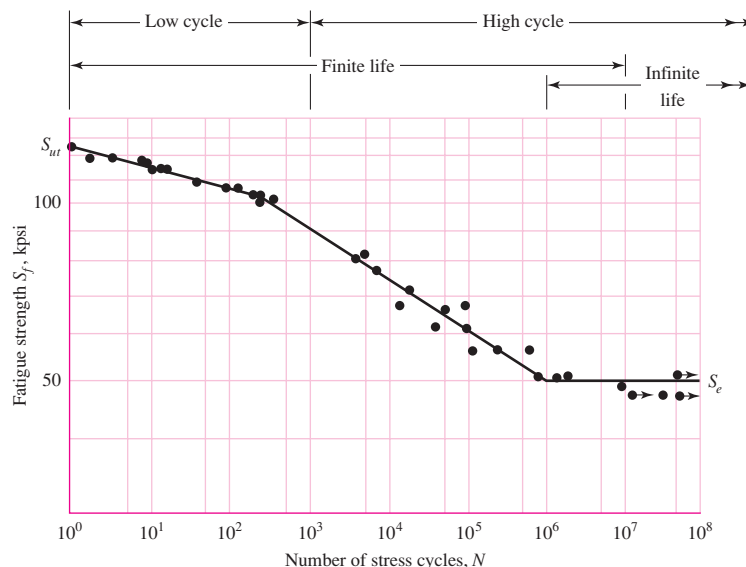
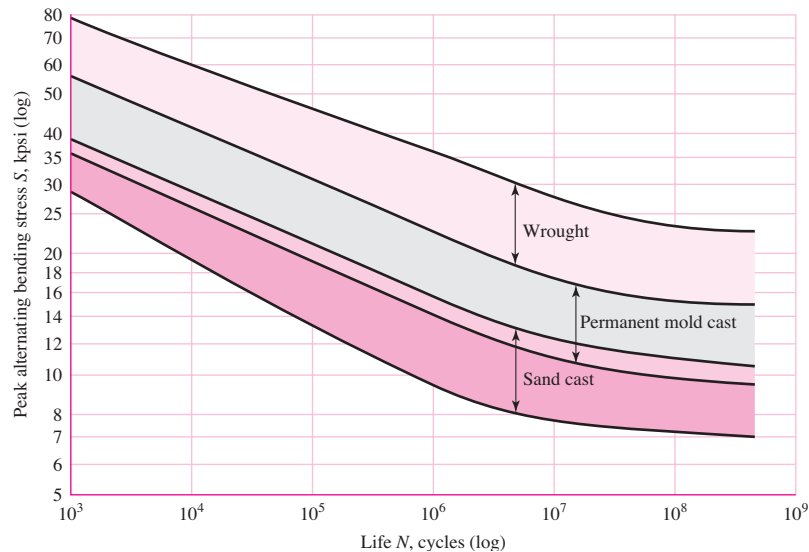


Figure 6-11

S - N bands for representative aluminum alloys, excluding wrought alloys with $S_{ut} < 38$ kpsi. (From R. C. Juvinall, *Engineering Considerations of Stress, Strain and Strength*. Copyright © 1967 by The McGraw-Hill Companies, Inc. Reprinted by permission.)



The ordinate of the S - N diagram is called the *fatigue strength* S_f ; a statement of this strength value must always be accompanied by a statement of the number of cycles N to which it corresponds.

Soon we shall learn that S - N diagrams can be determined either for a test specimen or for an actual mechanical element. Even when the material of the test specimen and that of the mechanical element are identical, there will be significant differences between the diagrams for the two.

In the case of the steels, a knee occurs in the graph, and beyond this knee failure will not occur, no matter how great the number of cycles. The strength corresponding to the knee is called the *endurance limit* S_e , or the *fatigue limit*. The graph of Fig. 6-10 never does become horizontal for nonferrous metals and alloys, and hence these materials do not have an endurance limit. Figure 6-11 shows scatter bands indicating the S - N curves for most common aluminum alloys excluding wrought alloys having a tensile strength below 38 kpsi. Since aluminum does not have an endurance limit, normally the fatigue strength S_f is reported at a specific number of cycles, normally $N = 5(10^8)$ cycles of reversed stress (see Table A-24).

We note that a stress cycle ($N = 1$) constitutes a single application and removal of a load and then another application and removal of the load in the opposite direction. Thus $N = \frac{1}{2}$ means the load is applied once and then removed, which is the case with the simple tension test.

The body of knowledge available on fatigue failure from $N = 1$ to $N = 1000$ cycles is generally classified as *low-cycle fatigue*, as indicated in Fig. 6-10. *High-cycle fatigue*, then, is concerned with failure corresponding to stress cycles greater than 10^3 cycles.

We also distinguish a *finite-life region* and an *infinite-life region* in Fig. 6-10. The boundary between these regions cannot be clearly defined except for a specific material; but it lies somewhere between 10^6 and 10^7 cycles for steels, as shown in Fig. 6-10.

As noted previously, it is always good engineering practice to conduct a testing program on the materials to be employed in design and manufacture. This, in fact, is a requirement, not an option, in guarding against the possibility of a fatigue failure.

Because of this necessity for testing, it would really be unnecessary for us to proceed any further in the study of fatigue failure except for one important reason: the desire to know why fatigue failures occur so that the most effective method or methods can be used to improve fatigue strength. Thus our primary purpose in studying fatigue is to understand why failures occur so that we can guard against them in an optimum manner. For this reason, the analytical design approaches presented in this book, or in any other book, for that matter, do not yield absolutely precise results. The results should be taken as a guide, as something that indicates what is important and what is not important in designing against fatigue failure.

As stated earlier, the stress-life method is the least accurate approach especially for low-cycle applications. However, it is the most traditional method, with much published data available. It is the easiest to implement for a wide range of design applications and represents high-cycle applications adequately. For these reasons the stress-life method will be emphasized in subsequent sections of this chapter. However, care should be exercised when applying the method for low-cycle applications, as the method does not account for the true stress-strain behavior when localized yielding occurs.

6-5 The Strain-Life Method

The best approach yet advanced to explain the nature of fatigue failure is called by some the *strain-life* method. The approach can be used to estimate fatigue strengths, but when it is so used it is necessary to compound several idealizations, and so some uncertainties will exist in the results. For this reason, the method is presented here only because of its value in explaining the nature of fatigue.

A fatigue failure almost always begins at a local discontinuity such as a notch, crack, or other area of stress concentration. When the stress at the discontinuity exceeds the elastic limit, plastic strain occurs. If a fatigue fracture is to occur, there must exist cyclic plastic strains. Thus we shall need to investigate the behavior of materials subject to cyclic deformation.

In 1910, Bairstow verified by experiment Bauschinger's theory that the elastic limits of iron and steel can be changed, either up or down, by the cyclic variations of stress.² In general, the elastic limits of annealed steels are likely to increase when subjected to cycles of stress reversals, while cold-drawn steels exhibit a decreasing elastic limit.

R. W. Landgraf has investigated the low-cycle fatigue behavior of a large number of very high-strength steels, and during his research he made many cyclic stress-strain plots.³ Figure 6-12 has been constructed to show the general appearance of these plots for the first few cycles of controlled cyclic strain. In this case the strength decreases with stress repetitions, as evidenced by the fact that the reversals occur at ever-smaller stress levels. As previously noted, other materials may be strengthened, instead, by cyclic stress reversals.

The SAE Fatigue Design and Evaluation Steering Committee released a report in 1975 in which the life in reversals to failure is related to the strain amplitude $\Delta\varepsilon/2$.⁴

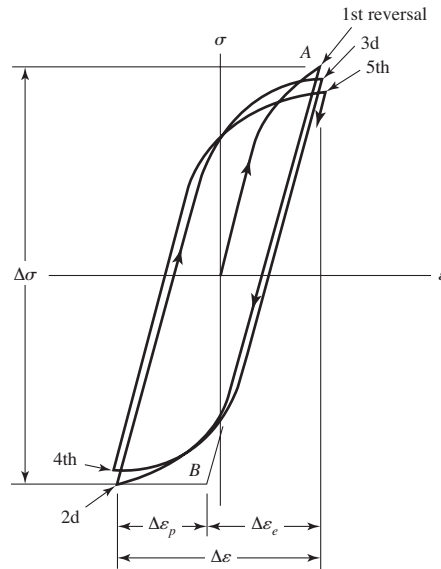
²L. Bairstow, "The Elastic Limits of Iron and Steel under Cyclic Variations of Stress," *Philosophical Transactions*, Series A, vol. 210, Royal Society of London, 1910, pp. 35–55.

³R. W. Landgraf, *Cyclic Deformation and Fatigue Behavior of Hardened Steels*, Report no. 320, Department of Theoretical and Applied Mechanics, University of Illinois, Urbana, 1968, pp. 84–90.

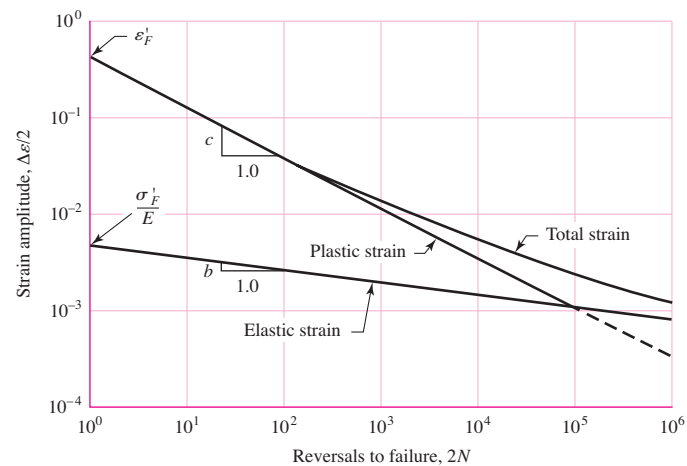
⁴*Technical Report on Fatigue Properties*, SAE J1099, 1975.

Figure 6-12

True stress–true strain hysteresis loops showing the first five stress reversals of a cyclic-softening material. The graph is slightly exaggerated for clarity. Note that the slope of the line AB is the modulus of elasticity E . The stress range is $\Delta\sigma$, $\Delta\varepsilon_p$ is the plastic-strain range, and $\Delta\varepsilon_e$ is the elastic strain range. The total-strain range is $\Delta\varepsilon = \Delta\varepsilon_p + \Delta\varepsilon_e$.

**Figure 6-13**

A log-log plot showing how the fatigue life is related to the true-strain amplitude for hot-rolled SAE 1020 steel. (Reprinted with permission from SAE J1099_200208 © 2002 SAE International.)



The report contains a plot of this relationship for SAE 1020 hot-rolled steel; the graph has been reproduced as Fig. 6–13. To explain the graph, we first define the following terms:

- *Fatigue ductility coefficient* ε'_F is the true strain corresponding to fracture in one reversal (point A in Fig. 6–12). The plastic-strain line begins at this point in Fig. 6–13.
- *Fatigue strength coefficient* σ'_F is the true stress corresponding to fracture in one reversal (point A in Fig. 6–12). Note in Fig. 6–13 that the elastic-strain line begins at σ'_F/E .
- *Fatigue ductility exponent* c is the slope of the plastic-strain line in Fig. 6–13 and is the power to which the life $2N$ must be raised to be proportional to the true plastic-strain amplitude. If the number of stress reversals is $2N$, then N is the number of cycles.

- *Fatigue strength exponent b* is the slope of the elastic-strain line, and is the power to which the life $2N$ must be raised to be proportional to the true-stress amplitude.

Now, from Fig. 6–12, we see that the total strain is the sum of the elastic and plastic components. Therefore the total strain amplitude is half the total strain range

$$\frac{\Delta\varepsilon}{2} = \frac{\Delta\varepsilon_e}{2} + \frac{\Delta\varepsilon_p}{2} \quad (a)$$

The equation of the plastic-strain line in Fig. 6–13 is

$$\frac{\Delta\varepsilon_p}{2} = \varepsilon'_F (2N)^c \quad (6-1)$$

The equation of the elastic strain line is

$$\frac{\Delta\varepsilon_e}{2} = \frac{\sigma'_F}{E} (2N)^b \quad (6-2)$$

Therefore, from Eq. (a), we have for the total-strain amplitude

$$\frac{\Delta\varepsilon}{2} = \frac{\sigma'_F}{E} (2N)^b + \varepsilon'_F (2N)^c \quad (6-3)$$

which is the Manson-Coffin relationship between fatigue life and total strain.⁵ Some values of the coefficients and exponents are listed in Table A–23. Many more are included in the SAE J1099 report.⁶

Though Eq. (6–3) is a perfectly legitimate equation for obtaining the fatigue life of a part when the strain and other cyclic characteristics are given, it appears to be of little use to the designer. The question of how to determine the total strain at the bottom of a notch or discontinuity has not been answered. There are no tables or charts of strain concentration factors in the literature. It is possible that strain concentration factors will become available in research literature very soon because of the increase in the use of finite-element analysis. Moreover, finite element analysis can of itself approximate the strains that will occur at all points in the subject structure.⁷

6–6 The Linear-Elastic Fracture Mechanics Method

The first phase of fatigue cracking is designated as stage I fatigue. Crystal slip that extends through several contiguous grains, inclusions, and surface imperfections is presumed to play a role. Since most of this is invisible to the observer, we just say that stage I involves several grains. The second phase, that of crack extension, is called stage II fatigue. The advance of the crack (that is, new crack area is created) does produce evidence that can be observed on micrographs from an electron microscope. The growth of

⁵J. F. Tavernelli and L. F. Coffin, Jr., “Experimental Support for Generalized Equation Predicting Low Cycle Fatigue,” and S. S. Manson, discussion, *Trans. ASME, J. Basic Eng.*, vol. 84, no. 4, pp. 533–537.

⁶See also, Landgraf, *Ibid.*

⁷For further discussion of the strain-life method see N. E. Dowling, *Mechanical Behavior of Materials*, 2nd ed., Prentice-Hall, Englewood Cliffs, N.J., 1999, Chap. 14.

the crack is orderly. Final fracture occurs during stage III fatigue, although fatigue is not involved. When the crack is sufficiently long that $K_I = K_{Ic}$ for the stress amplitude involved, then K_{Ic} is the critical stress intensity for the undamaged metal, and there is sudden, catastrophic failure of the remaining cross section in tensile overload (see Sec. 5–12). Stage III fatigue is associated with rapid acceleration of crack growth then fracture.

Crack Growth

Fatigue cracks nucleate and grow when stresses vary and there is some tension in each stress cycle. Consider the stress to be fluctuating between the limits of σ_{\min} and σ_{\max} , where the stress range is defined as $\Delta\sigma = \sigma_{\max} - \sigma_{\min}$. From Eq. (5–37) the stress intensity is given by $K_I = \beta\sigma\sqrt{\pi a}$. Thus, for $\Delta\sigma$, the stress intensity range per cycle is

$$\Delta K_I = \beta(\sigma_{\max} - \sigma_{\min})\sqrt{\pi a} = \beta\Delta\sigma\sqrt{\pi a} \quad (6-4)$$

To develop fatigue strength data, a number of specimens of the same material are tested at various levels of $\Delta\sigma$. Cracks nucleate at or very near a free surface or large discontinuity. Assuming an initial crack length of a_i , crack growth as a function of the number of stress cycles N will depend on $\Delta\sigma$, that is, ΔK_I . For ΔK_I below some threshold value $(\Delta K_I)_{th}$ a crack will not grow. Figure 6–14 represents the crack length a as a function of N for three stress levels $(\Delta\sigma)_3 > (\Delta\sigma)_2 > (\Delta\sigma)_1$, where $(\Delta K_I)_3 > (\Delta K_I)_2 > (\Delta K_I)_1$. Notice the effect of the higher stress range in Fig. 6–14 in the production of longer cracks at a particular cycle count.

When the rate of crack growth per cycle, da/dN in Fig. 6–14, is plotted as shown in Fig. 6–15, the data from all three stress range levels superpose to give a sigmoidal curve. The three stages of crack development are observable, and the stage II data are linear on log-log coordinates, within the domain of linear elastic fracture mechanics (LEFM) validity. A group of similar curves can be generated by changing the stress ratio $R = \sigma_{\min}/\sigma_{\max}$ of the experiment.

Here we present a simplified procedure for estimating the remaining life of a cyclically stressed part after discovery of a crack. This requires the assumption that plane strain

Figure 6–14

The increase in crack length a from an initial length of a_i as a function of cycle count for three stress ranges, $(\Delta\sigma)_3 > (\Delta\sigma)_2 > (\Delta\sigma)_1$.

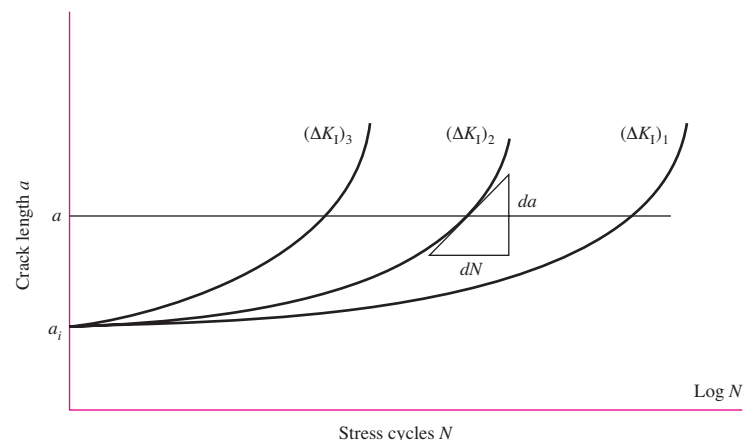


Figure 6-15

When da/dN is measured in Fig. 6-14 and plotted on loglog coordinates, the data for different stress ranges *superpose*, giving rise to a sigmoid curve as shown. $(\Delta K_I)_{th}$ is the threshold value of ΔK_I , below which a crack does not grow. From threshold to rupture an aluminum alloy will spend 85–90 percent of life in region I, 5–8 percent in region II, and 1–2 percent in region III.

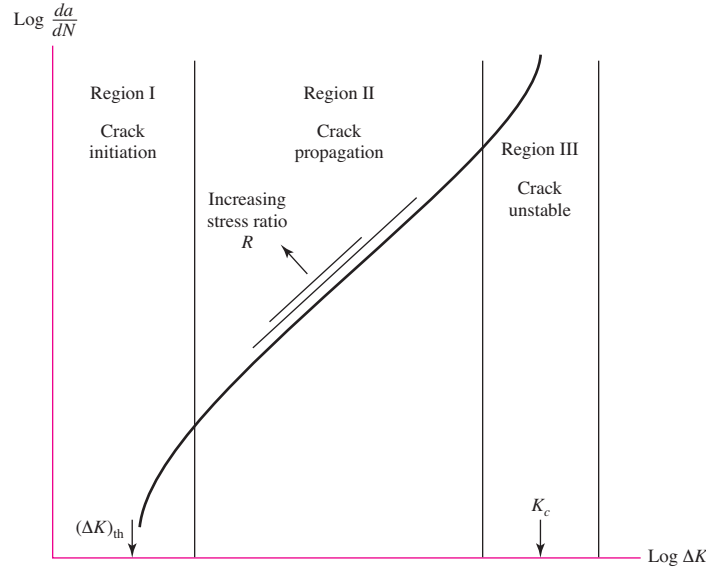


Table 6-1

Conservative Values of Factor C and Exponent m in Eq. (6-5) for Various Forms of Steel ($R \doteq 0$)

Material	$C, \frac{m/cycle}{(MPa\sqrt{m})^m}$	$C, \frac{in/cycle}{(kpsi\sqrt{in})^m}$	m
Ferritic-pearlitic steels	$6.89(10^{-12})$	$3.60(10^{-10})$	3.00
Martensitic steels	$1.36(10^{-10})$	$6.60(10^{-9})$	2.25
Austenitic stainless steels	$5.61(10^{-12})$	$3.00(10^{-10})$	3.25

From J.M. Barsom and S.T. Rolfe, *Fatigue and Fracture Control in Structures, 2nd ed.*, Prentice Hall, Upper Saddle River, NJ, 1987, pp. 288–291, Copyright ASTM International. Reprinted with permission.

conditions prevail.⁸ Assuming a crack is discovered early in stage II, the crack growth in region II of Fig. 6-15 can be approximated by the *Paris equation*, which is of the form

$$\frac{da}{dN} = C(\Delta K_I)^m \quad (6-5)$$

where C and m are empirical material constants and ΔK_I is given by Eq. (6-4). Representative, but conservative, values of C and m for various classes of steels are listed in Table 6-1. Substituting Eq. (6-4) and integrating gives

$$\int_0^{N_f} dN = N_f = \frac{1}{C} \int_{a_i}^{a_f} \frac{da}{(\beta \Delta \sigma \sqrt{\pi a})^m} \quad (6-6)$$

Here a_i is the initial crack length, a_f is the final crack length corresponding to failure, and N_f is the estimated number of cycles to produce a failure *after* the initial crack is formed. Note that β may vary in the integration variable (e.g., see Figs. 5-25 to 5-30).

⁸Recommended references are: Dowling, op. cit.; J. A. Collins, *Failure of Materials in Mechanical Design*, John Wiley & Sons, New York, 1981; H. O. Fuchs and R. I. Stephens, *Metal Fatigue in Engineering*, John Wiley & Sons, New York, 1980; and Harold S. Reemsnyder, “Constant Amplitude Fatigue Life Assessment Models,” *SAE Trans.* 820688, vol. 91, Nov. 1983.

If this should happen, then Reemsnyder⁹ suggests the use of numerical integration employing the algorithm

$$\begin{aligned}\delta a_j &= C(\Delta K_I)_j^m (\delta N)_j \\ a_{j+1} &= a_j + \delta a_j \\ N_{j+1} &= N_j + \delta N_j \\ N_f &= \sum \delta N_j\end{aligned}\tag{6-7}$$

Here δa_j and δN_j are increments of the crack length and the number of cycles. The procedure is to select a value of δN_j , using a_j determine β and compute ΔK_I , determine δa_j , and then find the next value of a . Repeat the procedure until $a = a_f$.

The following example is highly simplified with β constant in order to give some understanding of the procedure. Normally, one uses fatigue crack growth computer programs such as NASA/FLAGRO 2.0 with more comprehensive theoretical models to solve these problems.

⁹Op. cit.

EXAMPLE 6-1

The bar shown in Fig. 6-16 is subjected to a repeated moment $0 \leq M \leq 1200 \text{ lbf} \cdot \text{in}$. The bar is AISI 4430 steel with $S_{ut} = 185 \text{ kpsi}$, $S_y = 170 \text{ kpsi}$, and $K_{Ic} = 73 \text{ kpsi}\sqrt{\text{in}}$. Material tests on various specimens of this material with identical heat treatment indicate worst-case constants of $C = 3.8(10^{-11})(\text{in}/\text{cycle})/(\text{kpsi}\sqrt{\text{in}})^m$ and $m = 3.0$. As shown, a nick of size 0.004 in has been discovered on the bottom of the bar. Estimate the number of cycles of life remaining.

Solution The stress range $\Delta\sigma$ is always computed by using the nominal (uncracked) area. Thus

$$\frac{I}{c} = \frac{bh^2}{6} = \frac{0.25(0.5)^2}{6} = 0.01042 \text{ in}^3$$

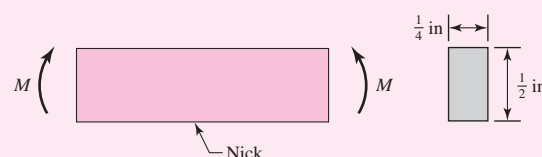
Therefore, before the crack initiates, the stress range is

$$\Delta\sigma = \frac{\Delta M}{I/c} = \frac{1200}{0.01042} = 115.2(10^3) \text{ psi} = 115.2 \text{ kpsi}$$

which is below the yield strength. As the crack grows, it will eventually become long enough such that the bar will completely yield or undergo a brittle fracture. For the ratio of S_y/S_{ut} it is highly unlikely that the bar will reach complete yield. For brittle fracture, designate the crack length as a_f . If $\beta = 1$, then from Eq. (5-37) with $K_I = K_{Ic}$, we approximate a_f as

$$a_f = \frac{1}{\pi} \left(\frac{K_{Ic}}{\beta\sigma_{\max}} \right)^2 \doteq \frac{1}{\pi} \left(\frac{73}{115.2} \right)^2 = 0.1278 \text{ in}$$

| Figure 6-16



From Fig. 5–27, we compute the ratio a_f/h as

$$\frac{a_f}{h} = \frac{0.1278}{0.5} = 0.256$$

Thus a_f/h varies from near zero to approximately 0.256. From Fig. 5–27, for this range β is nearly constant at approximately 1.07. We will assume it to be so, and re-evaluate a_f as

$$a_f = \frac{1}{\pi} \left(\frac{73}{1.07(115.2)} \right)^2 = 0.112 \text{ in}$$

Thus, from Eq. (6–6), the estimated remaining life is

$$\begin{aligned} N_f &= \frac{1}{C} \int_{a_i}^{a_f} \frac{da}{(\beta \Delta \sigma \sqrt{\pi a})^m} = \frac{1}{3.8(10^{-11})} \int_{0.004}^{0.112} \frac{da}{[1.07(115.2)\sqrt{\pi a}]^3} \\ &= \left. -\frac{5.047(10^3)}{\sqrt{a}} \right|_{0.004}^{0.112} = 64.7 (10^3) \text{ cycles} \end{aligned}$$

6–7 The Endurance Limit

The determination of endurance limits by fatigue testing is now routine, though a lengthy procedure. Generally, stress testing is preferred to strain testing for endurance limits.

For preliminary and prototype design and for some failure analysis as well, a quick method of estimating endurance limits is needed. There are great quantities of data in the literature on the results of rotating-beam tests and simple tension tests of specimens taken from the same bar or ingot. By plotting these as in Fig. 6–17, it is possible to see whether there is any correlation between the two sets of results. The graph appears to suggest that the endurance limit ranges from about 40 to 60 percent of the tensile strength for steels up to about 210 kpsi (1450 MPa). Beginning at about $S_{ut} = 210$ kpsi (1450 MPa), the scatter appears to increase, but the trend seems to level off, as suggested by the dashed horizontal line at $S'_e = 105$ kpsi.

We wish now to present a method for estimating endurance limits. Note that estimates obtained from quantities of data obtained from many sources probably have a large spread and might deviate significantly from the results of actual laboratory tests of the mechanical properties of specimens obtained through strict purchase-order specifications. Since the area of uncertainty is greater, compensation must be made by employing larger design factors than would be used for static design.

For steels, simplifying our observation of Fig. 6–17, we will estimate the endurance limit as

$$S'_e = \begin{cases} 0.5S_{ut} & S_{ut} \leq 200 \text{ kpsi (1400 MPa)} \\ 100 \text{ kpsi} & S_{ut} > 200 \text{ kpsi} \\ 700 \text{ MPa} & S_{ut} > 1400 \text{ MPa} \end{cases} \quad (6-8)$$

where S_{ut} is the *minimum* tensile strength. The prime mark on S'_e in this equation refers to the *rotating-beam specimen* itself. We wish to reserve the unprimed symbol S_e for the endurance limit of any particular machine element subjected to any kind of loading. Soon we shall learn that the two strengths may be quite different.

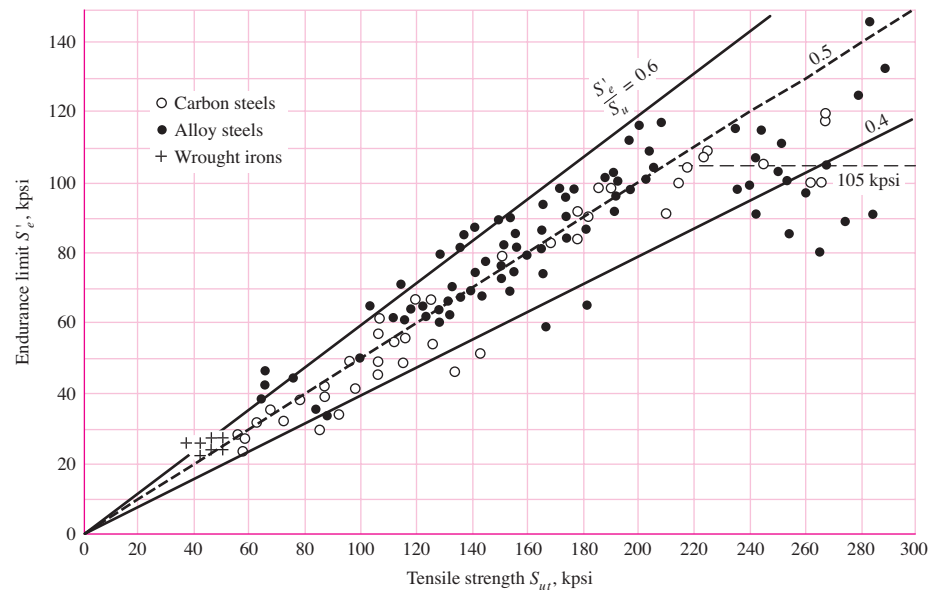


Figure 6-17

Graph of endurance limits versus tensile strengths from actual test results for a large number of wrought irons and steels. Ratios of S'_e/S_{ut} of 0.60, 0.50, and 0.40 are shown by the solid and dashed lines. Note also the horizontal dashed line for $S'_e = 105$ kpsi. Points shown having a tensile strength greater than 210 kpsi have a mean endurance limit of $S'_e = 105$ kpsi and a standard deviation of 13.5 kpsi. (Collated from data compiled by H. J. Grover, S. A. Gordon, and L. R. Jackson in *Fatigue of Metals and Structures*, Bureau of Naval Weapons Document NAVWEPS 00-25-534, 1960; and from *Fatigue Design Handbook*, SAE, 1968, p. 42.)

Steels treated to give different microstructures have different S'_e/S_{ut} ratios. It appears that the more ductile microstructures have a higher ratio. Martensite has a very brittle nature and is highly susceptible to fatigue-induced cracking; thus the ratio is low. When designs include detailed heat-treating specifications to obtain specific microstructures, it is possible to use an estimate of the endurance limit based on test data for the particular microstructure; such estimates are much more reliable and indeed should be used.

The endurance limits for various classes of cast irons, polished or machined, are given in Table A-24. Aluminum alloys do not have an endurance limit. The fatigue strengths of some aluminum alloys at $5(10^8)$ cycles of reversed stress are given in Table A-24.

6-8 Fatigue Strength

As shown in Fig. 6-10, a region of low-cycle fatigue extends from $N = 1$ to about 10^3 cycles. In this region the fatigue strength S_f is only slightly smaller than the tensile strength S_{ut} . An analytical approach has been given by Mischke¹⁰ for both

¹⁰J. E. Shigley, C. R. Mischke, and T. H. Brown, Jr., *Standard Handbook of Machine Design*, 3rd ed., McGraw-Hill, New York, 2004, pp. 29.25–29.27.

high-cycle and low-cycle regions, requiring the parameters of the Manson-Coffin equation plus the strain-strengthening exponent m . Engineers often have to work with less information.

Figure 6–10 indicates that the high-cycle fatigue domain extends from 10^3 cycles for steels to the endurance limit life N_e , which is about 10^6 to 10^7 cycles. The purpose of this section is to develop methods of approximation of the S - N diagram in the high-cycle region, when information may be as sparse as the results of a simple tension test. Experience has shown high-cycle fatigue data are rectified by a logarithmic transform to both stress and cycles-to-failure. Equation (6–2) can be used to determine the fatigue strength at 10^3 cycles. Defining the specimen fatigue strength at a specific number of cycles as $(S'_f)_N = E \Delta \varepsilon_e / 2$, write Eq. (6–2) as

$$(S'_f)_N = \sigma'_F (2N)^b \quad (6-9)$$

At 10^3 cycles,

$$(S'_f)_{10^3} = \sigma'_F (2 \cdot 10^3)^b = f S_{ut}$$

where f is the fraction of S_{ut} represented by $(S'_f)_{10^3}$ cycles. Solving for f gives

$$f = \frac{\sigma'_F}{S_{ut}} (2 \cdot 10^3)^b \quad (6-10)$$

Now, from Eq. (2–11), $\sigma'_F = \sigma_0 \varepsilon^m$, with $\varepsilon = \varepsilon'_F$. If this true-stress–true-strain equation is not known, the SAE approximation¹¹ for steels with $H_B \leq 500$ may be used:

$$\sigma'_F = S_{ut} + 50 \text{ kpsi} \quad \text{or} \quad \sigma'_F = S_{ut} + 345 \text{ MPa} \quad (6-11)$$

To find b , substitute the endurance strength and corresponding cycles, S'_e and N_e , respectively into Eq. (6–9) and solving for b

$$b = -\frac{\log(\sigma'_F/S'_e)}{\log(2N_e)} \quad (6-12)$$

Thus, the equation $S'_f = \sigma'_F (2N)^b$ is known. For example, if $S_{ut} = 105$ kpsi and $S'_e = 52.5$ kpsi at failure,

$$\text{Eq. (6-11)} \quad \sigma'_F = 105 + 50 = 155 \text{ kpsi}$$

$$\text{Eq. (6-12)} \quad b = -\frac{\log(155/52.5)}{\log(2 \cdot 10^6)} = -0.0746$$

$$\text{Eq. (6-10)} \quad f = \frac{155}{105} (2 \cdot 10^3)^{-0.0746} = 0.837$$

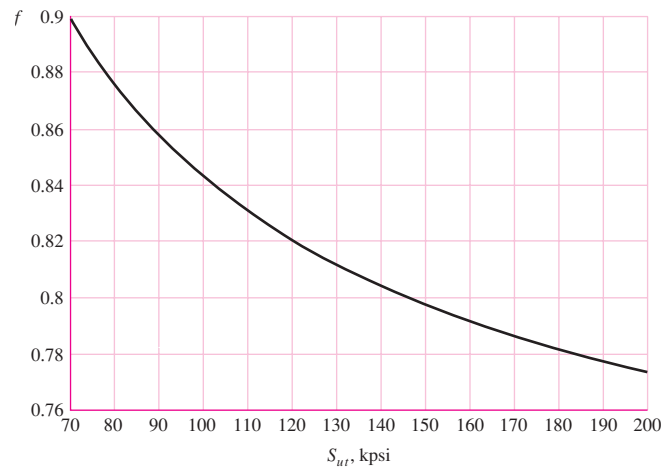
and for Eq. (6–9), with $S'_f = (S'_f)_N$,

$$S'_f = 155(2N)^{-0.0746} = 147 N^{-0.0746} \quad (a)$$

¹¹*Fatigue Design Handbook*, vol. 4, Society of Automotive Engineers, New York, 1958, p. 27.

Figure 6–18

Fatigue strength fraction, f , of
 S_{ut} at 10^3 cycles for
 $S_e = S'_e = 0.5 S_{ut}$.



The process given for finding f can be repeated for various ultimate strengths. Figure 6–18 is a plot of f for $70 \leq S_{ut} \leq 200$ kpsi. To be conservative, for $S_{ut} < 70$ kpsi, let $f = 0.9$.

For an actual mechanical component, S'_e is reduced to S_e (see Sec. 6–9) which is less than $0.5 S_{ut}$. However, unless actual data is available, we recommend using the value of f found from Fig. 6–18. Equation (a), for the actual mechanical component, can be written in the form

$$S_f = a N^b \quad (6-13)$$

where N is cycles to failure and the constants a and b are defined by the points $10^3, (S_f)_{10^3}$ and $10^6, S_e$ with $(S_f)_{10^3} = f S_{ut}$. Substituting these two points in Eq. (6–13) gives

$$a = \frac{(f S_{ut})^2}{S_e} \quad (6-14)$$

$$b = -\frac{1}{3} \log \left(\frac{f S_{ut}}{S_e} \right) \quad (6-15)$$

If a completely reversed stress σ_a is given, setting $S_f = \sigma_a$ in Eq. (6–13), the number of cycles-to-failure can be expressed as

$$N = \left(\frac{\sigma_a}{a} \right)^{1/b} \quad (6-16)$$

Low-cycle fatigue is often defined (see Fig. 6–10) as failure that occurs in a range of $1 \leq N \leq 10^3$ cycles. On a loglog plot such as Fig. 6–10 the failure locus in this range is nearly linear below 10^3 cycles. A straight line between $10^3, f S_{ut}$ and $1, S_{ut}$ (transformed) is conservative, and it is given by

$$S_f \geq S_{ut} N^{(\log f)/3} \quad 1 \leq N \leq 10^3 \quad (6-17)$$

EXAMPLE 6-2

Given a 1050 HR steel, *estimate*

- the rotating-beam endurance limit at 10^6 cycles.
- the endurance strength of a polished rotating-beam specimen corresponding to 10^4 cycles to failure
- the expected life of a polished rotating-beam specimen under a completely reversed stress of 55 kpsi.

Solution (a) From Table A-20, $S_{ut} = 90$ kpsi. From Eq. (6-8),

Answer

$$S'_e = 0.5(90) = 45 \text{ kpsi}$$

(b) From Fig. 6-18, for $S_{ut} = 90$ kpsi, $f \doteq 0.86$. From Eq. (6-14),

$$a = \frac{[0.86(90)]^2}{45} = 133.1 \text{ kpsi}$$

From Eq. (6-15),

$$b = -\frac{1}{3} \log \left[\frac{0.86(90)}{45} \right] = -0.0785$$

Thus, Eq. (6-13) is

$$S'_f = 133.1 N^{-0.0785}$$

Answer For 10^4 cycles to failure, $S'_f = 133.1(10^4)^{-0.0785} = 64.6$ kpsi

(c) From Eq. (6-16), with $\sigma_a = 55$ kpsi,

Answer

$$N = \left(\frac{55}{133.1} \right)^{1/-0.0785} = 77\,500 = 7.75(10^4) \text{ cycles}$$

Keep in mind that these are only *estimates*. So expressing the answers using three-place accuracy is a little misleading.

6-9 Endurance Limit Modifying Factors

We have seen that the rotating-beam specimen used in the laboratory to determine endurance limits is prepared very carefully and tested under closely controlled conditions. It is unrealistic to expect the endurance limit of a mechanical or structural member to match the values obtained in the laboratory. Some differences include

- *Material*: composition, basis of failure, variability
- *Manufacturing*: method, heat treatment, fretting corrosion, surface condition, stress concentration
- *Environment*: corrosion, temperature, stress state, relaxation times
- *Design*: size, shape, life, stress state, stress concentration, speed, fretting, galling

Marin¹² identified factors that quantified the effects of surface condition, size, loading, temperature, and miscellaneous items. The question of whether to adjust the endurance limit by subtractive corrections or multiplicative corrections was resolved by an extensive statistical analysis of a 4340 (electric furnace, aircraft quality) steel, in which a correlation coefficient of 0.85 was found for the multiplicative form and 0.40 for the additive form. A Marin equation is therefore written as

$$S_e = k_a k_b k_c k_d k_e k_f S'_e \quad (6-18)$$

where

- k_a = surface condition modification factor
- k_b = size modification factor
- k_c = load modification factor
- k_d = temperature modification factor
- k_e = reliability factor¹³
- k_f = miscellaneous-effects modification factor
- S'_e = rotary-beam test specimen endurance limit
- S_e = endurance limit at the critical location of a machine part in the geometry and condition of use

When endurance tests of parts are not available, estimations are made by applying Marin factors to the endurance limit.

Surface Factor k_a

The surface of a rotating-beam specimen is highly polished, with a final polishing in the axial direction to smooth out any circumferential scratches. The surface modification factor depends on the quality of the finish of the actual part surface and on the tensile strength of the part material. To find quantitative expressions for common finishes of machine parts (ground, machined, or cold-drawn, hot-rolled, and as-forged), the coordinates of data points were recaptured from a plot of endurance limit versus ultimate tensile strength of data gathered by Lipson and Noll and reproduced by Horger.¹⁴ The data can be represented by

$$k_a = a S_{ut}^b \quad (6-19)$$

where S_{ut} is the minimum tensile strength and a and b are to be found in Table 6–2.

¹²Joseph Marin, *Mechanical Behavior of Engineering Materials*, Prentice-Hall, Englewood Cliffs, N.J., 1962, p. 224.

¹³Complete stochastic analysis is presented in Sec. 6–17. Until that point the presentation here is one of a deterministic nature. However, we must take care of the known scatter in the fatigue data. This means that we will not carry out a true reliability analysis at this time but will attempt to answer the question: What is the probability that a *known* (assumed) stress will exceed the strength of a randomly selected component made from this material population?

¹⁴C. J. Noll and C. Lipson, "Allowable Working Stresses," *Society for Experimental Stress Analysis*, vol. 3, no. 2, 1946, p. 29. Reproduced by O. J. Horger (ed.), *Metals Engineering Design ASME Handbook*, McGraw-Hill, New York, 1953, p. 102.

Table 6–2

Parameters for Marin
Surface Modification
Factor, Eq. (6–19)

Surface Finish	Factor a		Exponent b
	S_{ut} , kpsi	S_{ut} , MPa	
Ground	1.34	1.58	−0.085
Machined or cold-drawn	2.70	4.51	−0.265
Hotrolled	14.4	57.7	−0.718
As-forged	39.9	272.	−0.995

From C.J. Noll and C. Lipson, "Allowable Working Stresses," *Society for Experimental Stress Analysis*, vol. 3, no. 2, 1946 p. 29. Reproduced by O.J. Harger (ed.) *Metals Engineering Design ASME Handbook*, McGraw-Hill, New York. Copyright © 1953 by The McGraw-Hill Companies, Inc. Reprinted by permission.

EXAMPLE 6–3

A steel has a minimum ultimate strength of 520 MPa and a machined surface. Estimate k_a .

Solution

From Table 6–2, $a = 4.51$ and $b = -0.265$. Then, from Eq. (6–19)

Answer

$$k_a = 4.51(520)^{-0.265} = 0.860$$

Again, it is important to note that this is an approximation as the data is typically quite scattered. Furthermore, this is not a correction to take lightly. For example, if in the previous example the steel was forged, the correction factor would be 0.540, a significant reduction of strength.

Size Factor k_b

The size factor has been evaluated using 133 sets of data points.¹⁵ The results for bending and torsion may be expressed as

$$k_b = \begin{cases} (d/0.3)^{-0.107} = 0.879d^{-0.107} & 0.11 \leq d \leq 2 \text{ in} \\ 0.91d^{-0.157} & 2 < d \leq 10 \text{ in} \\ (d/7.62)^{-0.107} = 1.24d^{-0.107} & 2.79 \leq d \leq 51 \text{ mm} \\ 1.51d^{-0.157} & 51 < d \leq 254 \text{ mm} \end{cases} \quad (6-20)$$

For axial loading there is no size effect, so

$$k_b = 1 \quad (6-21)$$

but see k_c .

One of the problems that arises in using Eq. (6–20) is what to do when a round bar in bending is not rotating, or when a noncircular cross section is used. For example, what is the size factor for a bar 6 mm thick and 40 mm wide? The approach to be used

¹⁵Charles R. Mischke, "Prediction of Stochastic Endurance Strength," *Trans. of ASME, Journal of Vibration, Acoustics, Stress, and Reliability in Design*, vol. 109, no. 1, January 1987, Table 3.

here employs an *effective dimension* d_e obtained by equating the volume of material stressed at and above 95 percent of the maximum stress to the same volume in the rotating-beam specimen.¹⁶ It turns out that when these two volumes are equated, the lengths cancel, and so we need only consider the areas. For a rotating round section, the 95 percent stress area is the area in a ring having an outside diameter d and an inside diameter of $0.95d$. So, designating the 95 percent stress area $A_{0.95\sigma}$, we have

$$A_{0.95\sigma} = \frac{\pi}{4}[d^2 - (0.95d)^2] = 0.0766d^2 \quad (6-22)$$

This equation is also valid for a rotating hollow round. For nonrotating solid or hollow rounds, the 95 percent stress area is twice the area outside of two parallel chords having a spacing of $0.95d$, where d is the diameter. Using an exact computation, this is

$$A_{0.95\sigma} = 0.01046d^2 \quad (6-23)$$

with d_e in Eq. (6-22), setting Eqs. (6-22) and (6-23) equal to each other enables us to solve for the effective diameter. This gives

$$d_e = 0.370d \quad (6-24)$$

as the effective size of a round corresponding to a nonrotating solid or hollow round.

A rectangular section of dimensions $h \times b$ has $A_{0.95\sigma} = 0.05hb$. Using the same approach as before,

$$d_e = 0.808(hb)^{1/2} \quad (6-25)$$

Table 6-3 provides $A_{0.95\sigma}$ areas of common structural shapes undergoing nonrotating bending.

¹⁶See R. Kuguel, "A Relation between Theoretical Stress Concentration Factor and Fatigue Notch Factor Deduced from the Concept of Highly Stressed Volume," *Proc. ASTM*, vol. 61, 1961, pp. 732–748.

EXAMPLE 6-4

A steel shaft loaded in bending is 32 mm in diameter, abutting a filleted shoulder 38 mm in diameter. The shaft material has a mean ultimate tensile strength of 690 MPa. Estimate the Marin size factor k_b if the shaft is used in

- (a) A rotating mode.
(b) A nonrotating mode.

Solution (a) From Eq. (6-20)

$$\text{Answer} \quad k_b = \left(\frac{d}{7.62}\right)^{-0.107} = \left(\frac{32}{7.62}\right)^{-0.107} = 0.858$$

(b) From Table 6-3,

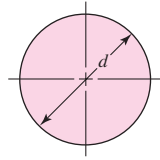
$$d_e = 0.37d = 0.37(32) = 11.84 \text{ mm}$$

From Eq. (6-20),

$$\text{Answer} \quad k_b = \left(\frac{11.84}{7.62}\right)^{-0.107} = 0.954$$

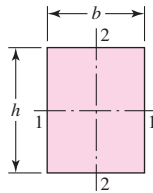
Table 6-3

$A_{0.95\sigma}$ Areas of
Common Nonrotating
Structural Shapes



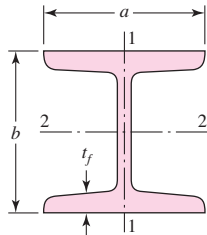
$$A_{0.95\sigma} = 0.01046d^2$$

$$d_e = 0.370d$$

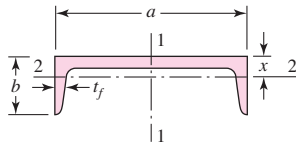


$$A_{0.95\sigma} = 0.05hb$$

$$d_e = 0.808\sqrt{hb}$$



$$A_{0.95\sigma} = \begin{cases} 0.10at_f & \text{axis 1-1} \\ 0.05ba & \text{axis 2-2} \end{cases} \quad t_f > 0.025a$$



$$A_{0.95\sigma} = \begin{cases} 0.05ab & \text{axis 1-1} \\ 0.052xa + 0.1t_f(b-x) & \text{axis 2-2} \end{cases}$$

Loading Factor k_c

When fatigue tests are carried out with rotating bending, axial (push-pull), and torsional loading, the endurance limits differ with S_{ut} . This is discussed further in Sec. 6–17. Here, we will specify average values of the load factor as

$$k_c = \begin{cases} 1 & \text{bending} \\ 0.85 & \text{axial} \\ 0.59 & \text{torsion}^{17} \end{cases} \quad (6-26)$$

Temperature Factor k_d

When operating temperatures are below room temperature, brittle fracture is a strong possibility and should be investigated first. When the operating temperatures are higher than room temperature, yielding should be investigated first because the yield strength drops off so rapidly with temperature; see Fig. 2–9. Any stress will induce creep in a material operating at high temperatures; so this factor must be considered too.

¹⁷Use this only for pure torsional fatigue loading. When torsion is combined with other stresses, such as bending, $k_c = 1$ and the combined loading is managed by using the effective von Mises stress as in Sec. 5–5. Note: For pure torsion, the distortion energy predicts that $(k_c)_{\text{torsion}} = 0.577$.

Table 6–4

Effect of Operating Temperature on the Tensile Strength of Steel. * (S_T = tensile strength at operating temperature; S_{RT} = tensile strength at room temperature; $0.099 \leq \hat{\sigma} \leq 0.110$)

Temperature, °C	S_T/S_{RT}	Temperature, °F	S_T/S_{RT}
20	1.000	70	1.000
50	1.010	100	1.008
100	1.020	200	1.020
150	1.025	300	1.024
200	1.020	400	1.018
250	1.000	500	0.995
300	0.975	600	0.963
350	0.943	700	0.927
400	0.900	800	0.872
450	0.843	900	0.797
500	0.768	1000	0.698
550	0.672	1100	0.567
600	0.549		

*Data source: Fig. 2–9.

Finally, it may be true that there is no fatigue limit for materials operating at high temperatures. Because of the reduced fatigue resistance, the failure process is, to some extent, dependent on time.

The limited amount of data available show that the endurance limit for steels increases slightly as the temperature rises and then begins to fall off in the 400 to 700°F range, not unlike the behavior of the tensile strength shown in Fig. 2–9. For this reason it is probably true that the endurance limit is related to tensile strength at elevated temperatures in the same manner as at room temperature.¹⁸ It seems quite logical, therefore, to employ the same relations to predict endurance limit at elevated temperatures as are used at room temperature, at least until more comprehensive data become available. At the very least, this practice will provide a useful standard against which the performance of various materials can be compared.

Table 6–4 has been obtained from Fig. 2–9 by using only the tensile-strength data. Note that the table represents 145 tests of 21 different carbon and alloy steels. A fourth-order polynomial curve fit to the data underlying Fig. 2–9 gives

$$k_d = 0.975 + 0.432(10^{-3})T_F - 0.115(10^{-5})T_F^2 + 0.104(10^{-8})T_F^3 - 0.595(10^{-12})T_F^4 \quad (6-27)$$

where $70 \leq T_F \leq 1000^\circ\text{F}$.

Two types of problems arise when temperature is a consideration. If the rotating-beam endurance limit is known at room temperature, then use

$$k_d = \frac{S_T}{S_{RT}} \quad (6-28)$$

¹⁸For more, see Table 2 of ANSI/ASME B106. 1M-1985 shaft standard, and E. A. Brandes (ed.), *Smithell's Metals Reference Book*, 6th ed., Butterworth, London, 1983, pp. 22–134 to 22–136, where endurance limits from 100 to 650°C are tabulated.

from Table 6–4 or Eq. (6–27) and proceed as usual. If the rotating-beam endurance limit is not given, then compute it using Eq. (6–8) and the temperature-corrected tensile strength obtained by using the factor from Table 6–4. Then use $k_d = 1$.

EXAMPLE 6–5

A 1035 steel has a tensile strength of 70 kpsi and is to be used for a part that sees 450°F in service. Estimate the Marin temperature modification factor and $(S_e)_{450^\circ}$ if
(a) The room-temperature endurance limit by test is $(S'_e)_{70^\circ} = 39.0$ kpsi.
(b) Only the tensile strength at room temperature is known.

Solution

(a) First, from Eq. (6–27),

$$k_d = 0.975 + 0.432(10^{-3})(450) - 0.115(10^{-5})(450^2) \\ + 0.104(10^{-8})(450^3) - 0.595(10^{-12})(450^4) = 1.007$$

Thus,

$$(S_e)_{450^\circ} = k_d(S'_e)_{70^\circ} = 1.007(39.0) = 39.3 \text{ kpsi}$$

Answer

(b) Interpolating from Table 6–4 gives

$$(S_T/S_{RT})_{450^\circ} = 1.018 + (0.995 - 1.018) \frac{450 - 400}{500 - 400} = 1.007$$

Thus, the tensile strength at 450°F is estimated as

$$(S_{ut})_{450^\circ} = (S_T/S_{RT})_{450^\circ} (S_{ut})_{70^\circ} = 1.007(70) = 70.5 \text{ kpsi}$$

From Eq. (6–8) then,

Answer

$$(S_e)_{450^\circ} = 0.5 (S_{ut})_{450^\circ} = 0.5(70.5) = 35.2 \text{ kpsi}$$

Part *a* gives the better estimate due to actual testing of the particular material.

Reliability Factor k_e

The discussion presented here accounts for the scatter of data such as shown in Fig. 6–17 where the mean endurance limit is shown to be $S'_e/S_{ut} \doteq 0.5$, or as given by Eq. (6–8). Most endurance strength data are reported as mean values. Data presented by Haugen and Wirsching¹⁹ show standard deviations of endurance strengths of less than 8 percent. Thus the reliability modification factor to account for this can be written as

$$k_e = 1 - 0.08 z_a \quad (6-29)$$

where z_a is defined by Eq. (20–16) and values for any desired reliability can be determined from Table A–10. Table 6–5 gives reliability factors for some standard specified reliabilities.

For a more comprehensive approach to reliability, see Sec. 6–17.

¹⁹E. B. Haugen and P. H. Wirsching, “Probabilistic Design,” *Machine Design*, vol. 47, no. 12, 1975, pp. 10–14.

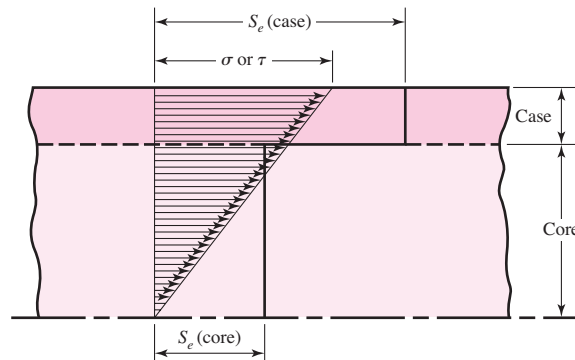
Table 6–5

Reliability Factors k_e
Corresponding to
8 Percent Standard
Deviation of the
Endurance Limit

Reliability, %	Transformation Variate z_α	Reliability Factor k_e
50	0	1.000
90	1.288	0.897
95	1.645	0.868
99	2.326	0.814
99.9	3.091	0.753
99.99	3.719	0.702
99.999	4.265	0.659
99.9999	4.753	0.620

Figure 6–19

The failure of a case-hardened part in bending or torsion. In this example, failure occurs in the core.



Miscellaneous-Effects Factor k_f

Though the factor k_f is intended to account for the reduction in endurance limit due to all other effects, it is really intended as a reminder that these must be accounted for, because actual values of k_f are not always available.

Residual stresses may either improve the endurance limit or affect it adversely. Generally, if the residual stress in the surface of the part is compression, the endurance limit is improved. Fatigue failures appear to be tensile failures, or at least to be caused by tensile stress, and so anything that reduces tensile stress will also reduce the possibility of a fatigue failure. Operations such as shot peening, hammering, and cold rolling build compressive stresses into the surface of the part and improve the endurance limit significantly. Of course, the material must not be worked to exhaustion.

The endurance limits of parts that are made from rolled or drawn sheets or bars, as well as parts that are forged, may be affected by the so-called *directional characteristics* of the operation. Rolled or drawn parts, for example, have an endurance limit in the transverse direction that may be 10 to 20 percent less than the endurance limit in the longitudinal direction.

Parts that are case-hardened may fail at the surface or at the maximum core radius, depending upon the stress gradient. Figure 6–19 shows the typical triangular stress distribution of a bar under bending or torsion. Also plotted as a heavy line in this figure are the endurance limits S_e for the case and core. For this example the endurance limit of the core rules the design because the figure shows that the stress σ or τ , whichever applies, at the outer core radius, is appreciably larger than the core endurance limit.

Of course, if stress concentration is also present, the stress gradient is much steeper, and hence failure in the core is unlikely.

Corrosion

It is to be expected that parts that operate in a corrosive atmosphere will have a lowered fatigue resistance. This is, of course, true, and it is due to the roughening or pitting of the surface by the corrosive material. But the problem is not so simple as the one of finding the endurance limit of a specimen that has been corroded. The reason for this is that the corrosion and the stressing occur at the same time. Basically, this means that in time any part will fail when subjected to repeated stressing in a corrosive atmosphere. There is no fatigue limit. Thus the designer's problem is to attempt to minimize the factors that affect the fatigue life; these are:

- Mean or static stress
- Alternating stress
- Electrolyte concentration
- Dissolved oxygen in electrolyte
- Material properties and composition
- Temperature
- Cyclic frequency
- Fluid flow rate around specimen
- Local crevices

Electrolytic Plating

Metallic coatings, such as chromium plating, nickel plating, or cadmium plating, reduce the endurance limit by as much as 50 percent. In some cases the reduction by coatings has been so severe that it has been necessary to eliminate the plating process. Zinc plating does not affect the fatigue strength. Anodic oxidation of light alloys reduces bending endurance limits by as much as 39 percent but has no effect on the torsional endurance limit.

Metal Spraying

Metal spraying results in surface imperfections that can initiate cracks. Limited tests show reductions of 14 percent in the fatigue strength.

Cyclic Frequency

If, for any reason, the fatigue process becomes time-dependent, then it also becomes frequency-dependent. Under normal conditions, fatigue failure is independent of frequency. But when corrosion or high temperatures, or both, are encountered, the cyclic rate becomes important. The slower the frequency and the higher the temperature, the higher the crack propagation rate and the shorter the life at a given stress level.

Fretage Corrosion

The phenomenon of fretage corrosion is the result of microscopic motions of tightly fitting parts or structures. Bolted joints, bearing-race fits, wheel hubs, and any set of tightly fitted parts are examples. The process involves surface discoloration, pitting, and eventual fatigue. The fretage factor k_f depends upon the material of the mating pairs and ranges from 0.24 to 0.90.

6-10 Stress Concentration and Notch Sensitivity

In Sec. 3–13 it was pointed out that the existence of irregularities or discontinuities, such as holes, grooves, or notches, in a part increases the theoretical stresses significantly in the immediate vicinity of the discontinuity. Equation (3–48) defined a stress concentration factor K_t (or K_{ts}), which is used with the nominal stress to obtain the maximum resulting stress due to the irregularity or defect. It turns out that some materials are not fully sensitive to the presence of notches and hence, for these, a reduced value of K_t can be used. For these materials, the maximum stress is, in fact,

$$\sigma_{\max} = K_f \sigma_0 \quad \text{or} \quad \tau_{\max} = K_{fs} \tau_0 \quad (6-30)$$

where K_f is a reduced value of K_t and σ_0 is the nominal stress. The factor K_f is commonly called a *fatigue stress-concentration factor*, and hence the subscript f . So it is convenient to think of K_f as a stress-concentration factor reduced from K_t because of lessened sensitivity to notches. The resulting factor is defined by the equation

$$K_f = \frac{\text{maximum stress in notched specimen}}{\text{stress in notch-free specimen}} \quad (a)$$

Notch sensitivity q is defined by the equation

$$q = \frac{K_f - 1}{K_t - 1} \quad \text{or} \quad q_{\text{shear}} = \frac{K_{fs} - 1}{K_{ts} - 1} \quad (6-31)$$

where q is usually between zero and unity. Equation (6–31) shows that if $q = 0$, then $K_f = 1$, and the material has no sensitivity to notches at all. On the other hand, if $q = 1$, then $K_f = K_t$, and the material has full notch sensitivity. In analysis or design work, find K_t first, from the geometry of the part. Then specify the material, find q , and solve for K_f from the equation

$$K_f = 1 + q(K_t - 1) \quad \text{or} \quad K_{fs} = 1 + q_{\text{shear}}(K_{ts} - 1) \quad (6-32)$$

For steels and 2024 aluminum alloys, use Fig. 6–20 to find q for bending and axial loading. For shear loading, use Fig. 6–21. In using these charts it is well to know that the actual test results from which the curves were derived exhibit a large amount of

Figure 6-20

Notch-sensitivity charts for steels and UNS A92024-T wrought aluminum alloys subjected to reversed bending or reversed axial loads. For larger notch radii, use the values of q corresponding to the $r = 0.16$ -in (4-mm) ordinate. (From George Sines and J. L. Waisman (eds.), *Metal Fatigue*, McGraw-Hill, New York. Copyright © 1969 by The McGraw-Hill Companies, Inc. Reprinted by permission.)

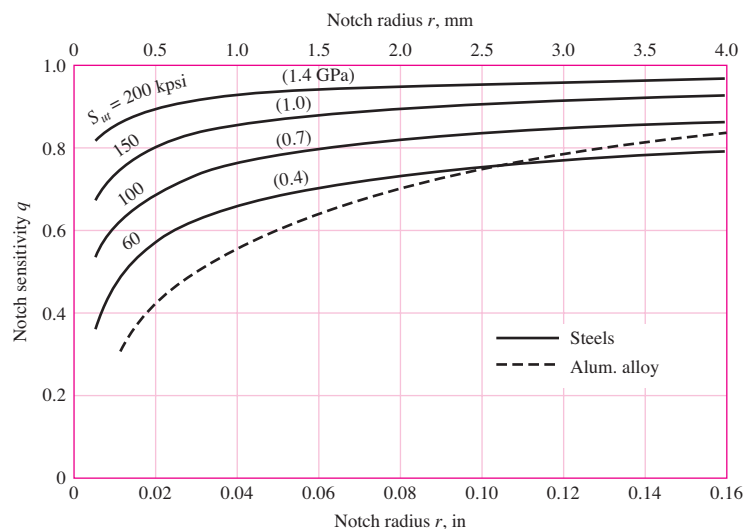
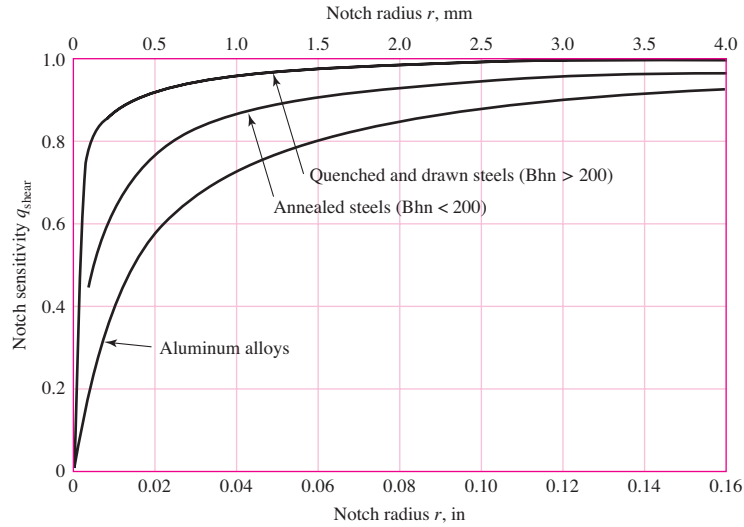


Figure 6-21

Notch-sensitivity curves for materials in reversed torsion. For larger notch radii, use the values of q_{shear} corresponding to $r = 0.16$ in (4 mm).



scatter. Because of this scatter it is always safe to use $K_f = K_t$ if there is any doubt about the true value of q . Also, note that q is not far from unity for large notch radii.

The notch sensitivity of the cast irons is very low, varying from 0 to about 0.20, depending upon the tensile strength. To be on the conservative side, it is recommended that the value $q = 0.20$ be used for all grades of cast iron.

Figure 6-20 has as its basis the *Neuber equation*, which is given by

$$K_f = 1 + \frac{K_t - 1}{1 + \sqrt{a/r}} \quad (6-33)$$

where \sqrt{a} is defined as the *Neuber constant* and is a material constant. Equating Eqs. (6-31) and (6-33) yields the notch sensitivity equation

$$q = \frac{1}{1 + \frac{\sqrt{a}}{\sqrt{r}}} \quad (6-34)$$

For steel, with S_{ut} in *ksi*, the Neuber constant can be approximated by a third-order polynomial fit of data as

$$\begin{aligned} \sqrt{a} = & 0.245\,799 - 0.307\,794(10^{-2})S_{ut} \\ & + 0.150\,874(10^{-4})S_{ut}^2 - 0.266\,978(10^{-7})S_{ut}^3 \end{aligned} \quad (6-35)$$

To use Eq. (6-33) or (6-34) for torsion for low-alloy steels, increase the ultimate strength by 20 *ksi* in Eq. (6-35) and apply this value of \sqrt{a} .

EXAMPLE 6-6

A steel shaft in bending has an ultimate strength of 690 MPa and a shoulder with a fillet radius of 3 mm connecting a 32-mm diameter with a 38-mm diameter. Estimate K_f using:

- (a) Figure 6-20.
- (b) Equations (6-33) and (6-35).

Solution From Fig. A-15-9, using $D/d = 38/32 = 1.1875$, $r/d = 3/32 = 0.09375$, we read the graph to find $K_t \doteq 1.65$.

(a) From Fig. 6-20, for $S_{ut} = 690$ MPa and $r = 3$ mm, $q \doteq 0.84$. Thus, from Eq. (6-32)

$$\text{Answer} \quad K_f = 1 + q(K_t - 1) \doteq 1 + 0.84(1.65 - 1) = 1.55$$

(b) From Eq. (6-35) with $S_{ut} = 690$ MPa = 100 kpsi, $\sqrt{a} = 0.0622\sqrt{\text{in}} = 0.313\sqrt{\text{mm}}$. Substituting this into Eq. (6-33) with $r = 3$ mm gives

$$\text{Answer} \quad K_f = 1 + \frac{K_t - 1}{1 + \sqrt{a/r}} \doteq 1 + \frac{1.65 - 1}{1 + \frac{0.313}{\sqrt{3}}} = 1.55$$

For simple loading, it is acceptable to reduce the endurance limit by either dividing the unnotched specimen endurance limit by K_f or multiplying the reversing stress by K_f . However, in dealing with combined stress problems that may involve more than one value of fatigue-concentration factor, the stresses are multiplied by K_f .

EXAMPLE 6-7

Consider an unnotched specimen with an endurance limit of 55 kpsi. If the specimen was notched such that $K_f = 1.6$, what would be the factor of safety against failure for $N > 10^6$ cycles at a reversing stress of 30 kpsi?

(a) Solve by reducing S'_e .

(b) Solve by increasing the applied stress.

Solution (a) The endurance limit of the notched specimen is given by

$$S_e = \frac{S'_e}{K_f} = \frac{55}{1.6} = 34.4 \text{ kpsi}$$

and the factor of safety is

$$\text{Answer} \quad n = \frac{S_e}{\sigma_a} = \frac{34.4}{30} = 1.15$$

(b) The maximum stress can be written as

$$(\sigma_a)_{\max} = K_f \sigma_a = 1.6(30) = 48.0 \text{ kpsi}$$

and the factor of safety is

$$\text{Answer} \quad n = \frac{S'_e}{K_f \sigma_a} = \frac{55}{48} = 1.15$$

Up to this point, examples illustrated each factor in Marin's equation and stress concentrations alone. Let us consider a number of factors occurring simultaneously.

EXAMPLE 6–8

A 1015 hot-rolled steel bar has been machined to a diameter of 1 in. It is to be placed in reversed axial loading for 70 000 cycles to failure in an operating environment of 550°F. Using ASTM minimum properties, and a reliability of 99 percent, estimate the endurance limit and fatigue strength at 70 000 cycles.

Solution

From Table A–20, $S_{ut} = 50$ kpsi at 70°F. Since the rotating-beam specimen endurance limit is not known at room temperature, we determine the ultimate strength at the elevated temperature first, using Table 6–4. From Table 6–4,

$$\left(\frac{S_T}{S_{RT}}\right)_{550^\circ} = \frac{0.995 + 0.963}{2} = 0.979$$

The ultimate strength at 550°F is then

$$(S_{ut})_{550^\circ} = (S_T/S_{RT})_{550^\circ} (S_{ut})_{70^\circ} = 0.979(50) = 49.0 \text{ kpsi}$$

The rotating-beam specimen endurance limit at 550°F is then estimated from Eq. (6–8) as

$$S'_e = 0.5(49) = 24.5 \text{ kpsi}$$

Next, we determine the Marin factors. For the machined surface, Eq. (6–19) with Table 6–2 gives

$$k_a = aS_{ut}^b = 2.70(49^{-0.265}) = 0.963$$

For axial loading, from Eq. (6–21), the size factor $k_b = 1$, and from Eq. (6–26) the loading factor is $k_c = 0.85$. The temperature factor $k_d = 1$, since we accounted for the temperature in modifying the ultimate strength and consequently the endurance limit. For 99 percent reliability, from Table 6–5, $k_e = 0.814$. Finally, since no other conditions were given, the miscellaneous factor is $k_f = 1$. The endurance limit for the part is estimated by Eq. (6–18) as

$$\begin{aligned} S_e &= k_a k_b k_c k_d k_e k_f S'_e \\ &= 0.963(1)(0.85)(1)(0.814)(1)24.5 = 16.3 \text{ kpsi} \end{aligned}$$

For the fatigue strength at 70 000 cycles we need to construct the S - N equation. From p. 277, since $S_{ut} = 49 < 70$ kpsi, then $f = 0.9$. From Eq. (6–14)

$$a = \frac{(f S_{ut})^2}{S_e} = \frac{[0.9(49)]^2}{16.3} = 119.3 \text{ kpsi}$$

and Eq. (6–15)

$$b = -\frac{1}{3} \log \left(\frac{f S_{ut}}{S_e} \right) = -\frac{1}{3} \log \left[\frac{0.9(49)}{16.3} \right] = -0.1441$$

Finally, for the fatigue strength at 70 000 cycles, Eq. (6–13) gives

$$S_f = a N^b = 119.3(70\,000)^{-0.1441} = 23.9 \text{ kpsi}$$

EXAMPLE 6–9

Figure 6–22a shows a rotating shaft simply supported in ball bearings at A and D and loaded by a nonrotating force F of 6.8 kN. Using ASTM “minimum” strengths, estimate the life of the part.

Solution

From Fig. 6–22b we learn that failure will probably occur at B rather than at C or at the point of maximum moment. Point B has a smaller cross section, a higher bending moment, and a higher stress-concentration factor than C , and the location of maximum moment has a larger size and no stress-concentration factor.

We shall solve the problem by first estimating the strength at point B , since the strength will be different elsewhere, and comparing this strength with the stress at the same point.

From Table A–20 we find $S_{ut} = 690$ MPa and $S_y = 580$ MPa. The endurance limit S'_e is estimated as

$$S'_e = 0.5(690) = 345 \text{ MPa}$$

From Eq. (6–19) and Table 6–2,

$$k_a = 4.51(690)^{-0.265} = 0.798$$

From Eq. (6–20),

$$k_b = (32/7.62)^{-0.107} = 0.858$$

Since $k_c = k_d = k_e = k_f = 1$,

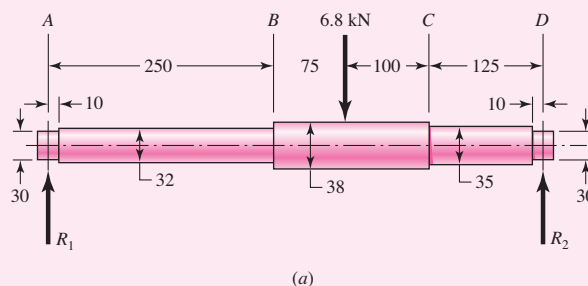
$$S_e = 0.798(0.858)345 = 236 \text{ MPa}$$

To find the geometric stress-concentration factor K_t we enter Fig. A–15–9 with $D/d = 38/32 = 1.1875$ and $r/d = 3/32 = 0.09375$ and read $K_t \doteq 1.65$. Substituting $S_{ut} = 690/6.89 = 100$ kpsi into Eq. (6–35) yields $\sqrt{a} = 0.0622 \sqrt{\text{in}} = 0.313 \sqrt{\text{mm}}$. Substituting this into Eq. (6–33) gives

$$K_f = 1 + \frac{K_t - 1}{1 + \sqrt{a}/r} = 1 + \frac{1.65 - 1}{1 + 0.313/\sqrt{3}} = 1.55$$

Figure 6–22

(a) Shaft drawing showing all dimensions in millimeters; all fillets 3-mm radius. The shaft rotates and the load is stationary; material is machined from AISI 1050 cold-drawn steel. (b) Bending-moment diagram.



(b)

The next step is to estimate the bending stress at point B . The bending moment is

$$M_B = R_1 x = \frac{225F}{550} 250 = \frac{225(6.8)}{550} 250 = 695.5 \text{ N} \cdot \text{m}$$

Just to the left of B the section modulus is $I/c = \pi d^3/32 = \pi 32^3/32 = 3.217 (10^3) \text{ mm}^3$. The reversing bending stress is, assuming infinite life,

$$\sigma = K_f \frac{M_B}{I/c} = 1.55 \frac{695.5}{3.217} (10)^{-6} = 335.1 (10^6) \text{ Pa} = 335.1 \text{ MPa}$$

This stress is greater than S_e and less than S_y . This means we have both finite life and no yielding on the first cycle.

For finite life, we will need to use Eq. (6–16). The ultimate strength, $S_{ut} = 690 \text{ MPa} = 100 \text{ kpsi}$. From Fig. 6–18, $f = 0.844$. From Eq. (6–14)

$$a = \frac{(f S_{ut})^2}{S_e} = \frac{[0.844(690)]^2}{236} = 1437 \text{ MPa}$$

and from Eq. (6–15)

$$b = -\frac{1}{3} \log \left(\frac{f S_{ut}}{S_e} \right) = -\frac{1}{3} \log \left[\frac{0.844(690)}{236} \right] = -0.1308$$

From Eq. (6–16),

Answer
$$N = \left(\frac{\sigma_a}{a} \right)^{1/b} = \left(\frac{335.1}{1437} \right)^{-1/0.1308} = 68(10^3) \text{ cycles}$$

6–11 Characterizing Fluctuating Stresses

Fluctuating stresses in machinery often take the form of a sinusoidal pattern because of the nature of some rotating machinery. However, other patterns, some quite irregular, do occur. It has been found that in periodic patterns exhibiting a single maximum and a single minimum of force, the shape of the wave is not important, but the peaks on both the high side (maximum) and the low side (minimum) are important. Thus F_{\max} and F_{\min} in a cycle of force can be used to characterize the force pattern. It is also true that ranging above and below some baseline can be equally effective in characterizing the force pattern. If the largest force is F_{\max} and the smallest force is F_{\min} , then a steady component and an alternating component can be constructed as follows:

$$F_m = \frac{F_{\max} + F_{\min}}{2} \quad F_a = \left| \frac{F_{\max} - F_{\min}}{2} \right|$$

where F_m is the midrange steady component of force, and F_a is the amplitude of the alternating component of force.

Figure 6–23

Some stress–time relations:
(a) fluctuating stress with high-frequency ripple;
(b and c) nonsinusoidal fluctuating stress;
(d) sinusoidal fluctuating stress;
(e) repeated stress;
(f) completely reversed sinusoidal stress.

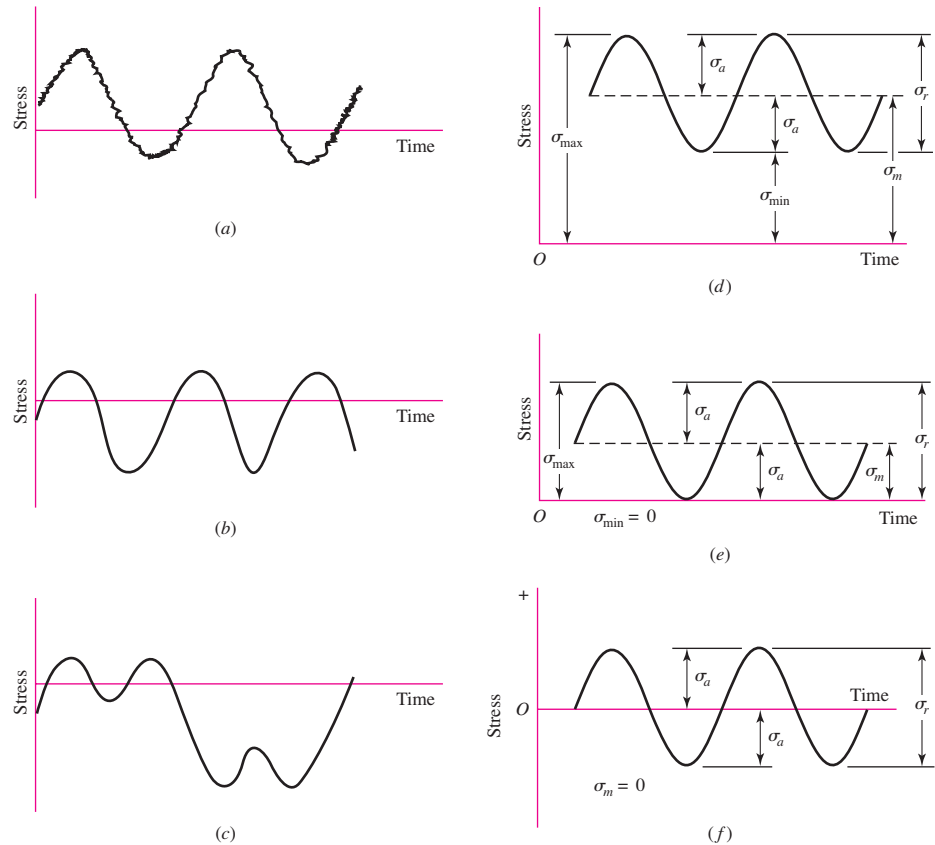


Figure 6–23 illustrates some of the various stress–time traces that occur. The components of stress, some of which are shown in Fig. 6–23*d*, are

$$\begin{aligned} \sigma_{min} &= \text{minimum stress} & \sigma_m &= \text{midrange component} \\ \sigma_{max} &= \text{maximum stress} & \sigma_r &= \text{range of stress} \\ \sigma_a &= \text{amplitude component} & \sigma_s &= \text{static or steady stress} \end{aligned}$$

The steady, or static, stress is *not* the same as the midrange stress; in fact, it may have any value between σ_{min} and σ_{max} . The steady stress exists because of a fixed load or preload applied to the part, and it is usually independent of the varying portion of the load. A helical compression spring, for example, is always loaded into a space shorter than the free length of the spring. The stress created by this initial compression is called the steady, or static, component of the stress. It is not the same as the midrange stress.

We shall have occasion to apply the subscripts of these components to shear stresses as well as normal stresses.

The following relations are evident from Fig. 6–23:

$$\begin{aligned} \sigma_m &= \frac{\sigma_{max} + \sigma_{min}}{2} \\ \sigma_a &= \left| \frac{\sigma_{max} - \sigma_{min}}{2} \right| \end{aligned} \tag{6-36}$$

In addition to Eq. (6–36), the *stress ratio*

$$R = \frac{\sigma_{\min}}{\sigma_{\max}} \quad (6-37)$$

and the *amplitude ratio*

$$A = \frac{\sigma_a}{\sigma_m} \quad (6-38)$$

are also defined and used in connection with fluctuating stresses.

Equations (6–36) utilize symbols σ_a and σ_m as the stress components at the location under scrutiny. This means, in the absence of a notch, σ_a and σ_m are equal to the nominal stresses σ_{ao} and σ_{mo} induced by loads F_a and F_m , respectively; in the presence of a notch they are $K_f\sigma_{ao}$ and $K_f\sigma_{mo}$, respectively, as long as the material remains without plastic strain. In other words, the fatigue stress concentration factor K_f is applied to *both* components.

When the steady stress component is high enough to induce localized notch yielding, the designer has a problem. The first-cycle local yielding produces plastic strain and strain-strengthening. This is occurring at the location where fatigue crack nucleation and growth are most likely. The material properties (S_y and S_{ut}) are new and difficult to quantify. The prudent engineer controls the concept, material and condition of use, and geometry so that no plastic strain occurs. There are discussions concerning possible ways of quantifying what is occurring under localized and general yielding in the presence of a notch, referred to as the *nominal mean stress* method, *residual stress* method, and the like.²⁰ The nominal mean stress method (set $\sigma_a = K_f\sigma_{ao}$ and $\sigma_m = \sigma_{mo}$) gives roughly comparable results to the residual stress method, but both are *approximations*.

There is the method of Dowling²¹ for ductile materials, which, for materials with a pronounced yield point and approximated by an elastic–perfectly plastic behavior model, quantitatively expresses the steady stress component stress-concentration factor K_{fm} as

$$\begin{aligned} K_{fm} &= K_f & K_f|\sigma_{\max,o}| < S_y \\ K_{fm} &= \frac{S_y - K_f\sigma_{ao}}{|\sigma_{mo}|} & K_f|\sigma_{\max,o}| > S_y \\ K_{fm} &= 0 & K_f|\sigma_{\max,o} - \sigma_{\min,o}| > 2S_y \end{aligned} \quad (6-39)$$

For the purposes of this book, for ductile materials in fatigue,

- Avoid localized plastic strain at a notch. Set $\sigma_a = K_f\sigma_{a,o}$ and $\sigma_m = K_f\sigma_{m,o}$.
- When plastic strain at a notch cannot be avoided, use Eqs. (6–39); or conservatively, set $\sigma_a = K_f\sigma_{ao}$ and use $K_{fm} = 1$, that is, $\sigma_m = \sigma_{mo}$.

²⁰R. C. Juvinall, *Stress, Strain, and Strength*, McGraw-Hill, New York, 1967, articles 14.9–14.12; R. C. Juvinall and K. M. Marshek, *Fundamentals of Machine Component Design*, 4th ed., Wiley, New York, 2006, Sec. 8.11; M. E. Dowling, *Mechanical Behavior of Materials*, 2nd ed., Prentice Hall, Englewood Cliffs, N.J., 1999, Secs. 10.3–10.5.

²¹Dowling, op. cit., p. 437–438.

6-12 Fatigue Failure Criteria for Fluctuating Stress

Now that we have defined the various components of stress associated with a part subjected to fluctuating stress, we want to vary both the midrange stress and the stress amplitude, or alternating component, to learn something about the fatigue resistance of parts when subjected to such situations. Three methods of plotting the results of such tests are in general use and are shown in Figs. 6–24, 6–25, and 6–26.

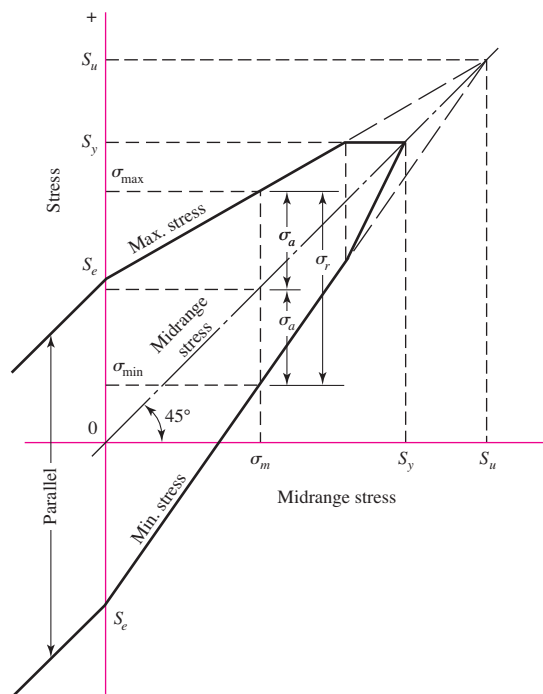
The *modified Goodman diagram* of Fig. 6–24 has the midrange stress plotted along the abscissa and all other components of stress plotted on the ordinate, with tension in the positive direction. The endurance limit, fatigue strength, or finite-life strength, whichever applies, is plotted on the ordinate above and below the origin. The midrange-stress line is a 45° line from the origin to the tensile strength of the part. The modified Goodman diagram consists of the lines constructed to S_e (or S_f) above and below the origin. Note that the yield strength is also plotted on both axes, because yielding would be the criterion of failure if σ_{\max} exceeded S_y .

Another way to display test results is shown in Fig. 6–25. Here the abscissa represents the ratio of the midrange strength S_m to the ultimate strength, with tension plotted to the right and compression to the left. The ordinate is the ratio of the alternating strength to the endurance limit. The line BC then represents the modified Goodman criterion of failure. Note that the existence of midrange stress in the compressive region has little effect on the endurance limit.

The very clever diagram of Fig. 6–26 is unique in that it displays four of the stress components as well as the two stress ratios. A curve representing the endurance limit for values of R beginning at $R = -1$ and ending with $R = 1$ begins at S_e on the σ_a axis and ends at S_{ut} on the σ_m axis. Constant-life curves for $N = 10^5$ and $N = 10^4$ cycles

Figure 6-24

Modified Goodman diagram showing all the strengths and the limiting values of all the stress components for a particular midrange stress.



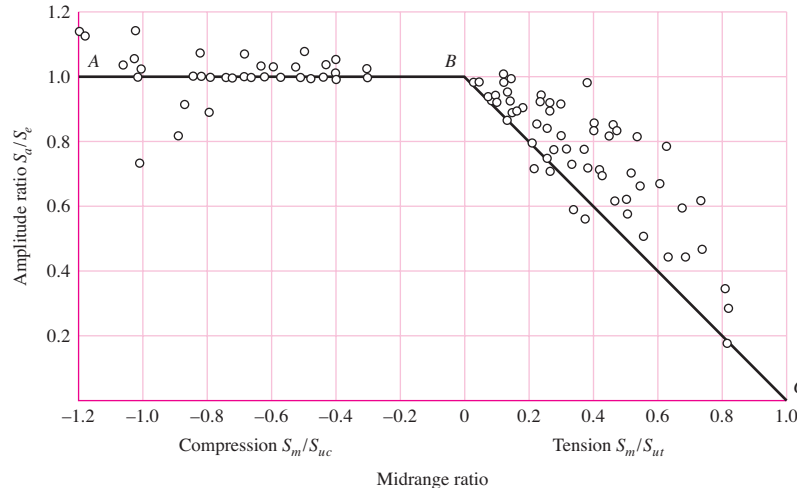
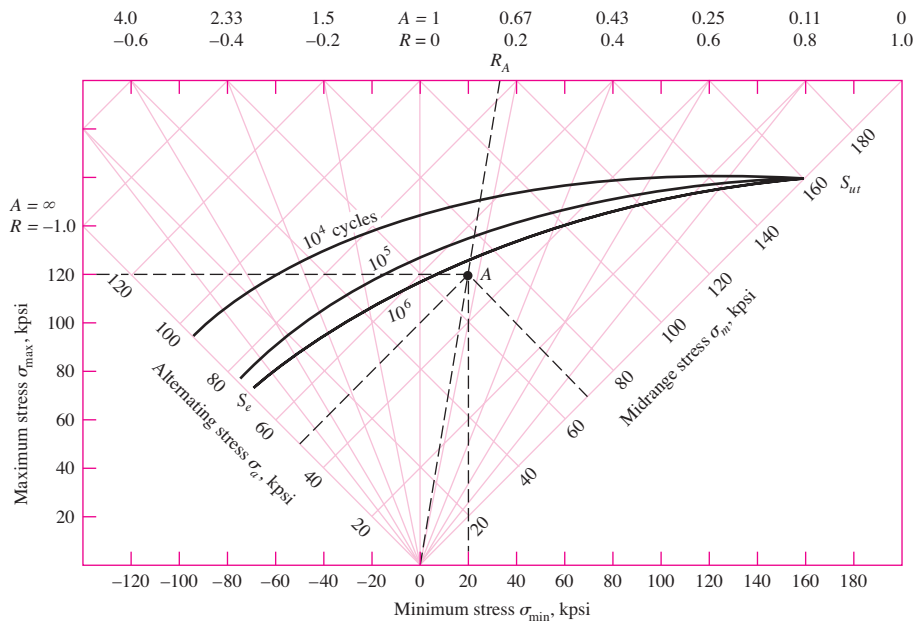


Figure 6-25

Plot of fatigue failures for midrange stresses in both tensile and compressive regions. Normalizing the data by using the ratio of steady strength component to tensile strength S_m/S_{ut} , steady strength component to compressive strength S_m/S_{uc} and strength amplitude component to endurance limit S_a/S_e enables a plot of experimental results for a variety of steels. [Data source: Thomas J. Dolan, "Stress Range," Sec. 6.2 in O. J. Horger (ed.), ASME Handbook—Metals Engineering Design, McGraw-Hill, New York, 1953.]

Figure 6-26

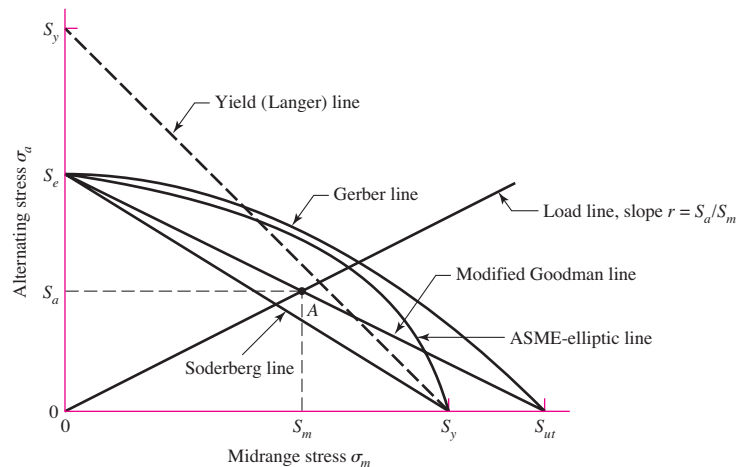
Master fatigue diagram created for AISI 4340 steel having $S_{yt} = 158$ and $S_y = 147$ kpsi. The stress components at A are $\sigma_{\min} = 20$, $\sigma_{\max} = 120$, $\sigma_m = 70$, and $\sigma_a = 50$, all in kpsi. (Source: H. J. Grover, Fatigue of Aircraft Structures, U.S. Government Printing Office, Washington, D.C., 1966, pp. 317, 322. See also J. A. Collins, Failure of Materials in Mechanical Design, Wiley, New York, 1981, p. 216.)



have been drawn too. Any stress state, such as the one at A, can be described by the minimum and maximum components, or by the midrange and alternating components. And safety is indicated whenever the point described by the stress components lies below the constant-life line.

Figure 6-27

Fatigue diagram showing various criteria of failure. For each criterion, points on or "above" the respective line indicate failure. Some point A on the Goodman line, for example, gives the strength S_m as the limiting value of σ_m corresponding to the strength S_a , which, paired with σ_m , is the limiting value of σ_a .



When the midrange stress is compression, failure occurs whenever $\sigma_a = S_e$ or whenever $\sigma_{\max} = S_{yc}$, as indicated by the left-hand side of Fig. 6-25. Neither a fatigue diagram nor any other failure criteria need be developed.

In Fig. 6-27, the tensile side of Fig. 6-25 has been redrawn in terms of strengths, instead of strength ratios, with the same modified Goodman criterion together with four additional criteria of failure. Such diagrams are often constructed for analysis and design purposes; they are easy to use and the results can be scaled off directly.

The early viewpoint expressed on a $\sigma_a\sigma_m$ diagram was that there existed a locus which divided safe from unsafe combinations of σ_a and σ_m . Ensuing proposals included the parabola of Gerber (1874), the Goodman (1890)²² (straight) line, and the Soderberg (1930) (straight) line. As more data were generated it became clear that a fatigue criterion, rather than being a “fence,” was more like a zone or band wherein the probability of failure could be estimated. We include the failure criterion of Goodman because

- It is a straight line and the algebra is linear and easy.
- It is easily graphed, every time for every problem.
- It reveals subtleties of insight into fatigue problems.
- Answers can be scaled from the diagrams as a check on the algebra.

We also caution that it is deterministic and the phenomenon is not. It is biased and we cannot quantify the bias. It is not conservative. It is a stepping-stone to understanding; it is history; and to read the work of other engineers and to have meaningful oral exchanges with them, it is necessary that you understand the Goodman approach should it arise.

Either the fatigue limit S_e or the finite-life strength S_f is plotted on the ordinate of Fig. 6-27. These values will have already been corrected using the Marin factors of Eq. (6-18). Note that the yield strength S_y is plotted on the ordinate too. This serves as a reminder that first-cycle yielding rather than fatigue might be the criterion of failure.

The midrange-stress axis of Fig. 6-27 has the yield strength S_y and the tensile strength S_{ut} plotted along it.

²²It is difficult to date Goodman's work because it went through several modifications and was never published.

Five criteria of failure are diagrammed in Fig. 6–27: the Soderberg, the modified Goodman, the Gerber, the ASME-elliptic, and yielding. The diagram shows that only the Soderberg criterion guards against any yielding, but is biased low.

Considering the modified Goodman line as a criterion, point *A* represents a limiting point with an alternating strength S_a and midrange strength S_m . The slope of the load line shown is defined as $r = S_a/S_m$.

The criterion equation for the Soderberg line is

$$\frac{S_a}{S_e} + \frac{S_m}{S_y} = 1 \quad (6-40)$$

Similarly, we find the modified Goodman relation to be

$$\frac{S_a}{S_e} + \frac{S_m}{S_{ut}} = 1 \quad (6-41)$$

Examination of Fig. 6–25 shows that both a parabola and an ellipse have a better opportunity to pass among the midrange tension data and to permit quantification of the probability of failure. The Gerber failure criterion is written as

$$\frac{S_a}{S_e} + \left(\frac{S_m}{S_{ut}}\right)^2 = 1 \quad (6-42)$$

and the ASME-elliptic is written as

$$\left(\frac{S_a}{S_e}\right)^2 + \left(\frac{S_m}{S_y}\right)^2 = 1 \quad (6-43)$$

The *Langer* first-cycle-yielding criterion is used in connection with the fatigue curve:

$$S_a + S_m = S_y \quad (6-44)$$

The stresses $n\sigma_a$ and $n\sigma_m$ can replace S_a and S_m , where n is the design factor or factor of safety. Then, Eq. (6–40), the Soderberg line, becomes

$$\text{Soderberg} \quad \frac{\sigma_a}{S_e} + \frac{\sigma_m}{S_y} = \frac{1}{n} \quad (6-45)$$

Equation (6–41), the modified Goodman line, becomes

$$\text{mod-Goodman} \quad \frac{\sigma_a}{S_e} + \frac{\sigma_m}{S_{ut}} = \frac{1}{n} \quad (6-46)$$

Equation (6–42), the Gerber line, becomes

$$\text{Gerber} \quad \frac{n\sigma_a}{S_e} + \left(\frac{n\sigma_m}{S_{ut}}\right)^2 = 1 \quad (6-47)$$

Equation (6–43), the ASME-elliptic line, becomes

$$\text{ASME-elliptic} \quad \left(\frac{n\sigma_a}{S_e}\right)^2 + \left(\frac{n\sigma_m}{S_y}\right)^2 = 1 \quad (6-48)$$

We will emphasize the Gerber and ASME-elliptic for fatigue failure criterion and the Langer for first-cycle yielding. However, conservative designers often use the modified Goodman criterion, so we will continue to include it in our discussions. The design equation for the Langer first-cycle-yielding is

$$\text{Langer static yield} \quad \sigma_a + \sigma_m = \frac{S_y}{n} \quad (6-49)$$

The failure criteria are used in conjunction with a load line, $r = S_a/S_m = \sigma_a/\sigma_m$. Principal intersections are tabulated in Tables 6–6 to 6–8. Formal expressions for fatigue factor of safety are given in the lower panel of Tables 6–6 to 6–8. The first row of each table corresponds to the fatigue criterion, the second row is the static Langer criterion, and the third row corresponds to the intersection of the static and fatigue

Table 6–6

Amplitude and Steady
Coordinates of Strength
and Important
Intersections in First
Quadrant for Modified
Goodman and Langer
Failure Criteria

Intersecting Equations	Intersection Coordinates
$\frac{S_a}{S_e} + \frac{S_m}{S_{ut}} = 1$	$S_a = \frac{r S_e S_{ut}}{r S_{ut} + S_e}$
Load line $r = \frac{S_a}{S_m}$	$S_m = \frac{S_a}{r}$
$\frac{S_a}{S_y} + \frac{S_m}{S_y} = 1$	$S_a = \frac{r S_y}{1 + r}$
Load line $r = \frac{S_a}{S_m}$	$S_m = \frac{S_y}{1 + r}$
$\frac{S_a}{S_e} + \frac{S_m}{S_{ut}} = 1$	$S_m = \frac{(S_y - S_e) S_{ut}}{S_{ut} - S_e}$
$\frac{S_a}{S_y} + \frac{S_m}{S_y} = 1$	$S_a = S_y - S_m, r_{crit} = S_a/S_m$

Fatigue factor of safety

$$n_f = \frac{1}{\frac{\sigma_a}{S_e} + \frac{\sigma_m}{S_{ut}}}$$

Table 6–7

Amplitude and Steady
Coordinates of Strength
and Important
Intersections in First
Quadrant for Gerber
and Langer Failure
Criteria

Intersecting Equations	Intersection Coordinates
$\frac{S_a}{S_e} + \left(\frac{S_m}{S_{ut}}\right)^2 = 1$	$S_a = \frac{r^2 S_{ut}^2}{2 S_e} \left[-1 + \sqrt{1 + \left(\frac{2 S_e}{r S_{ut}}\right)^2} \right]$
Load line $r = \frac{S_a}{S_m}$	$S_m = \frac{S_a}{r}$
$\frac{S_a}{S_y} + \frac{S_m}{S_y} = 1$	$S_a = \frac{r S_y}{1 + r}$
Load line $r = \frac{S_a}{S_m}$	$S_m = \frac{S_y}{1 + r}$
$\frac{S_a}{S_e} + \left(\frac{S_m}{S_{ut}}\right)^2 = 1$	$S_m = \frac{S_{ut}^2}{2 S_e} \left[1 - \sqrt{1 + \left(\frac{2 S_e}{S_{ut}}\right)^2 \left(1 - \frac{S_y}{S_e}\right)} \right]$
$\frac{S_a}{S_y} + \frac{S_m}{S_y} = 1$	$S_a = S_y - S_m, r_{crit} = S_a/S_m$

Fatigue factor of safety

$$n_f = \frac{1}{2} \left(\frac{S_{ut}}{\sigma_m}\right)^2 \frac{\sigma_a}{S_e} \left[-1 + \sqrt{1 + \left(\frac{2 \sigma_m S_e}{S_{ut} \sigma_a}\right)^2} \right] \quad \sigma_m > 0$$

Table 6–8

Amplitude and Steady Coordinates of Strength and Important Intersections in First Quadrant for ASME-Elliptic and Langer Failure Criteria

Intersecting Equations	Intersection Coordinates
$\left(\frac{S_a}{S_e}\right)^2 + \left(\frac{S_m}{S_y}\right)^2 = 1$ Load line $r = S_a/S_m$	$S_a = \sqrt{\frac{r^2 S_e^2 S_y^2}{S_e^2 + r^2 S_y^2}}$ $S_m = \frac{S_a}{r}$
$\frac{S_a}{S_y} + \frac{S_m}{S_y} = 1$ Load line $r = S_a/S_m$	$S_a = \frac{r S_y}{1 + r}$ $S_m = \frac{S_y}{1 + r}$
$\left(\frac{S_a}{S_e}\right)^2 + \left(\frac{S_m}{S_y}\right)^2 = 1$ $\frac{S_a}{S_y} + \frac{S_m}{S_y} = 1$	$S_a = 0, \frac{2 S_y S_e^2}{S_e^2 + S_y^2}$ $S_m = S_y - S_a, r_{crit} = S_a/S_m$

Fatigue factor of safety

$$n_f = \sqrt{\frac{1}{(\sigma_a/S_e)^2 + (\sigma_m/S_y)^2}}$$

criteria. The first column gives the intersecting equations and the second column the intersection coordinates.

There are two ways to proceed with a typical analysis. One method is to assume that fatigue occurs first and use one of Eqs. (6–45) to (6–48) to determine n or size, depending on the task. Most often fatigue is the governing failure mode. Then follow with a static check. If static failure governs then the analysis is repeated using Eq. (6–49).

Alternatively, one could use the tables. Determine the load line and establish which criterion the load line intersects first and use the corresponding equations in the tables.

Some examples will help solidify the ideas just discussed.

EXAMPLE 6–10

A 1.5-in-diameter bar has been machined from an AISI 1050 cold-drawn bar. This part is to withstand a fluctuating tensile load varying from 0 to 16 kip. Because of the ends, and the fillet radius, a fatigue stress-concentration factor K_f is 1.85 for 10^6 or larger life. Find S_a and S_m and the factor of safety guarding against fatigue and first-cycle yielding, using (a) the Gerber fatigue line and (b) the ASME-elliptic fatigue line.

Solution

We begin with some preliminaries. From Table A–20, $S_{ut} = 100$ kpsi and $S_y = 84$ kpsi. Note that $F_a = F_m = 8$ kip. The Marin factors are, deterministically,

$$k_a = 2.70(100)^{-0.265} = 0.797; \text{ Eq. (6–19), Table 6–2, p. 279}$$

$$k_b = 1 \text{ (axial loading, see } k_c)$$

$k_c = 0.85$: Eq. (6–26), p. 282

$k_d = k_e = k_f = 1$

$S_e = 0.797(1)0.850(1)(1)(1)0.5(100) = 33.9$ kpsi: Eqs. (6–8), (6–18), p. 274, p. 279

The nominal axial stress components σ_{ao} and σ_{mo} are

$$\sigma_{ao} = \frac{4F_a}{\pi d^2} = \frac{4(8)}{\pi 1.5^2} = 4.53 \text{ kpsi} \quad \sigma_{mo} = \frac{4F_m}{\pi d^2} = \frac{4(8)}{\pi 1.5^2} = 4.53 \text{ kpsi}$$

Applying K_f to both components σ_{ao} and σ_{mo} constitutes a prescription of no notch yielding:

$$\sigma_a = K_f \sigma_{ao} = 1.85(4.53) = 8.38 \text{ kpsi} = \sigma_m$$

(a) Let us calculate the factors of safety first. From the bottom panel from Table 6–7 the factor of safety for fatigue is

Answer
$$n_f = \frac{1}{2} \left(\frac{100}{8.38} \right)^2 \left(\frac{8.38}{33.9} \right) \left\{ -1 + \sqrt{1 + \left[\frac{2(8.38)33.9}{100(8.38)} \right]^2} \right\} = 3.66$$

From Eq. (6–49) the factor of safety guarding against first-cycle yield is

Answer
$$n_y = \frac{S_y}{\sigma_a + \sigma_m} = \frac{84}{8.38 + 8.38} = 5.01$$

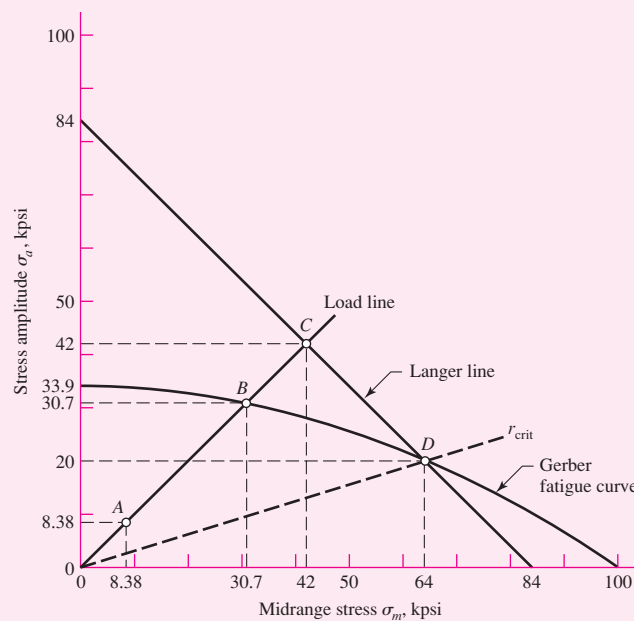
Thus, we see that fatigue will occur first and the factor of safety is 3.68. This can be seen in Fig. 6–28 where the load line intersects the Gerber fatigue curve first at point B . If the plots are created to true scale it would be seen that $n_f = OB/OA$.

From the first panel of Table 6–7, $r = \sigma_a/\sigma_m = 1$,

Answer
$$S_a = \frac{(1)^2 100^2}{2(33.9)} \left\{ -1 + \sqrt{1 + \left[\frac{2(33.9)}{(1)100} \right]^2} \right\} = 30.7 \text{ kpsi}$$

Figure 6–28

Principal points A , B , C , and D on the designer's diagram drawn for Gerber, Langer, and load line.



Answer

$$S_m = \frac{S_a}{r} = \frac{30.7}{1} = 30.7 \text{ kpsi}$$

As a check on the previous result, $n_f = OB/OA = S_a/\sigma_a = S_m/\sigma_m = 30.7/8.38 = 3.66$ and we see total agreement.

We could have detected that fatigue failure would occur first without drawing Fig. 6–28 by calculating r_{crit} . From the third row third column panel of Table 6–7, the intersection point between fatigue and first-cycle yield is

$$S_m = \frac{100^2}{2(33.9)} \left[1 - \sqrt{1 + \left(\frac{2(33.9)}{100} \right)^2 \left(1 - \frac{84}{33.9} \right)} \right] = 64.0 \text{ kpsi}$$

$$S_a = S_y - S_m = 84 - 64 = 20 \text{ kpsi}$$

The critical slope is thus

$$r_{crit} = \frac{S_a}{S_m} = \frac{20}{64} = 0.312$$

which is less than the actual load line of $r = 1$. This indicates that fatigue occurs before first-cycle-yield.

(b) Repeating the same procedure for the ASME-elliptic line, for fatigue

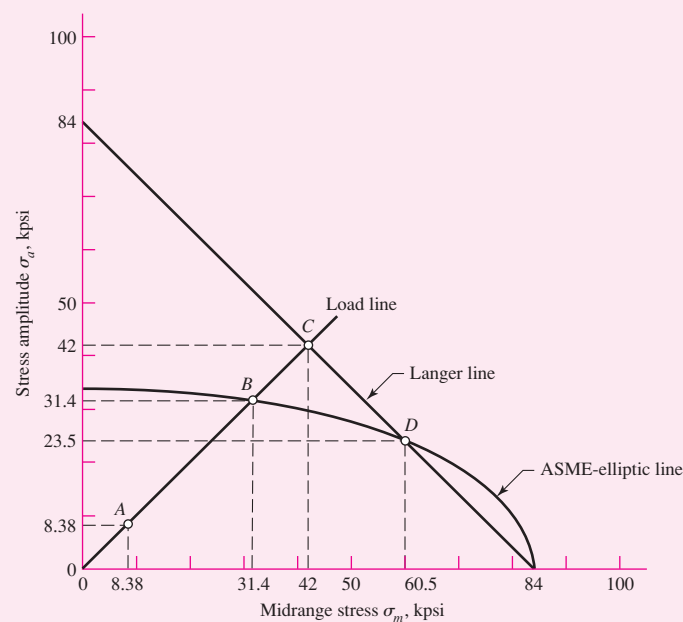
Answer

$$n_f = \sqrt{\frac{1}{(8.38/33.9)^2 + (8.38/84)^2}} = 3.75$$

Again, this is less than $n_y = 5.01$ and fatigue is predicted to occur first. From the first row second column panel of Table 6–8, with $r = 1$, we obtain the coordinates S_a and S_m of point B in Fig. 6–29 as

Figure 6–29

Principal points A , B , C , and D on the designer's diagram drawn for ASME-elliptic, Langer, and load lines.



Answer

$$S_a = \sqrt{\frac{(1)^2 33.9^2 (84)^2}{33.9^2 + (1)^2 84^2}} = 31.4 \text{ kpsi}, \quad S_m = \frac{S_a}{r} = \frac{31.4}{1} = 31.4 \text{ kpsi}$$

To verify the fatigue factor of safety, $n_f = S_a/\sigma_a = 31.4/8.38 = 3.75$.

As before, let us calculate r_{crit} . From the third row second column panel of Table 6–8,

$$S_a = \frac{2(84)33.9^2}{33.9^2 + 84^2} = 23.5 \text{ kpsi}, \quad S_m = S_y - S_a = 84 - 23.5 = 60.5 \text{ kpsi}$$

$$r_{\text{crit}} = \frac{S_a}{S_m} = \frac{23.5}{60.5} = 0.388$$

which again is less than $r = 1$, verifying that fatigue occurs first with $n_f = 3.75$.

The Gerber and the ASME-elliptic fatigue failure criteria are very close to each other and are used interchangeably. The ANSI/ASME Standard B106.1M–1985 uses ASME-elliptic for shafting.

EXAMPLE 6–11

A flat-leaf spring is used to retain an oscillating flat-faced follower in contact with a plate cam. The follower range of motion is 2 in and fixed, so the alternating component of force, bending moment, and stress is fixed, too. The spring is preloaded to adjust to various cam speeds. The preload must be increased to prevent follower float or jump. For lower speeds the preload should be decreased to obtain longer life of cam and follower surfaces. The spring is a steel cantilever 32 in long, 2 in wide, and $\frac{1}{4}$ in thick, as seen in Fig. 6–30a. The spring strengths are $S_{ut} = 150$ kpsi, $S_y = 127$ kpsi, and $S_e = 28$ kpsi fully corrected. The total cam motion is 2 in. The designer wishes to preload the spring by deflecting it 2 in for low speed and 5 in for high speed.

(a) Plot the Gerber-Langer failure lines with the load line.

(b) What are the strength factors of safety corresponding to 2 in and 5 in preload?

Solution

We begin with preliminaries. The second area moment of the cantilever cross section is

$$I = \frac{bh^3}{12} = \frac{2(0.25)^3}{12} = 0.00260 \text{ in}^4$$

Since, from Table A–9, beam 1, force F and deflection y in a cantilever are related by $F = 3EIy/l^3$, then stress σ and deflection y are related by

$$\sigma = \frac{Mc}{I} = \frac{32Fc}{I} = \frac{32(3EIy)c}{l^3 I} = \frac{96Ecy}{l^3} = Ky$$

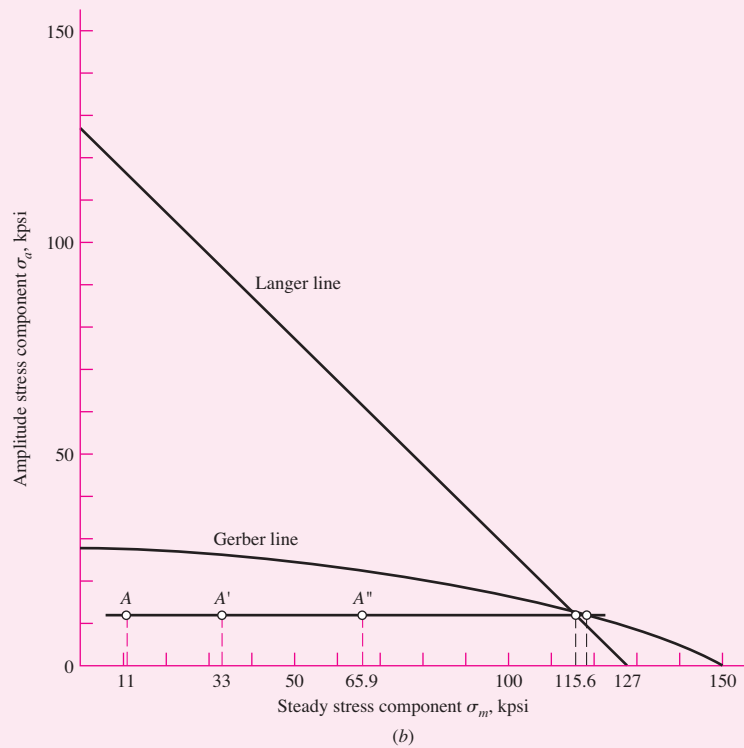
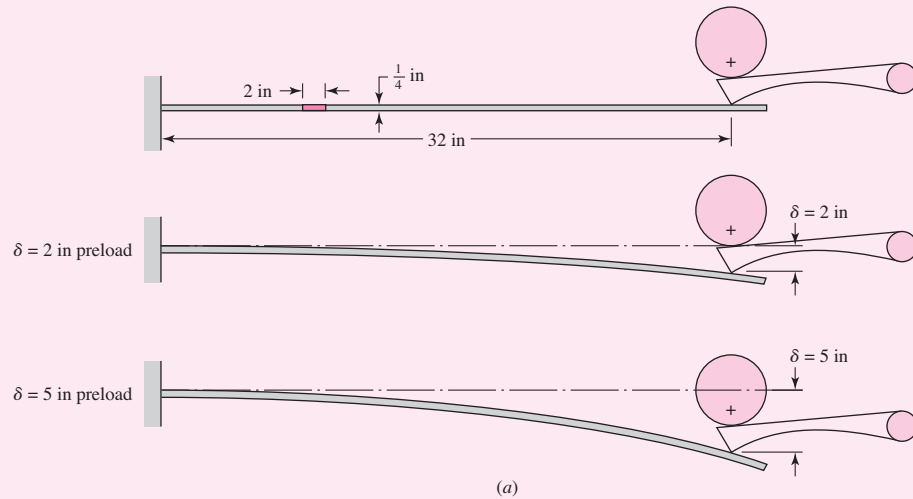
$$\text{where } K = \frac{96Ec}{l^3} = \frac{96(30 \cdot 10^6)(0.125)}{32^3} = 10.99(10^3) \text{ psi/in} = 10.99 \text{ kpsi/in}$$

Now the minimums and maximums of y and σ can be defined by

$$\begin{aligned} y_{\min} &= \delta & y_{\max} &= 2 + \delta \\ \sigma_{\min} &= K\delta & \sigma_{\max} &= K(2 + \delta) \end{aligned}$$

Figure 6-30

Cam follower retaining spring.
(a) Geometry; (b) designer's
fatigue diagram for Ex. 6-11.



The stress components are thus

$$\sigma_a = \frac{K(2 + \delta) - K\delta}{2} = K = 10.99 \text{ kpsi}$$

$$\sigma_m = \frac{K(2 + \delta) + K\delta}{2} = K(1 + \delta) = 10.99(1 + \delta)$$

For $\delta = 0$, $\sigma_a = \sigma_m = 10.99 = 11 \text{ kpsi}$

$$\text{For } \delta = 2 \text{ in, } \quad \sigma_a = 11 \text{ kpsi, } \sigma_m = 10.99(1 + 2) = 33 \text{ kpsi}$$

$$\text{For } \delta = 5 \text{ in, } \quad \sigma_a = 11 \text{ kpsi, } \sigma_m = 10.99(1 + 5) = 65.9 \text{ kpsi}$$

(a) A plot of the Gerber and Langer criteria is shown in Fig. 6–30*b*. The three preload deflections of 0, 2, and 5 in are shown as points *A*, *A'*, and *A''*. Note that since σ_a is constant at 11 kpsi, the load line is horizontal and does not contain the origin. The intersection between the Gerber line and the load line is found from solving Eq. (6–42) for S_m and substituting 11 kpsi for S_a :

$$S_m = S_{ut} \sqrt{1 - \frac{S_a}{S_e}} = 150 \sqrt{1 - \frac{11}{28}} = 116.9 \text{ kpsi}$$

The intersection of the Langer line and the load line is found from solving Eq. (6–44) for S_m and substituting 11 kpsi for S_a :

$$S_m = S_y - S_a = 127 - 11 = 116 \text{ kpsi}$$

The threats from fatigue and first-cycle yielding are approximately equal.

(b) For $\delta = 2$ in,

$$\text{Answer} \quad n_f = \frac{S_m}{\sigma_m} = \frac{116.9}{33} = 3.54 \quad n_y = \frac{116}{33} = 3.52$$

and for $\delta = 5$ in,

$$\text{Answer} \quad n_f = \frac{116.9}{65.9} = 1.77 \quad n_y = \frac{116}{65.9} = 1.76$$

EXAMPLE 6–12

A steel bar undergoes cyclic loading such that $\sigma_{\max} = 60$ kpsi and $\sigma_{\min} = -20$ kpsi. For the material, $S_{ut} = 80$ kpsi, $S_y = 65$ kpsi, a fully corrected endurance limit of $S_e = 40$ kpsi, and $f = 0.9$. Estimate the number of cycles to a fatigue failure using:

(a) Modified Goodman criterion.

(b) Gerber criterion.

Solution

From the given stresses,

$$\sigma_a = \frac{60 - (-20)}{2} = 40 \text{ kpsi} \quad \sigma_m = \frac{60 + (-20)}{2} = 20 \text{ kpsi}$$

From the material properties, Eqs. (6–14) to (6–16), p. 277, give

$$a = \frac{(f S_{ut})^2}{S_e} = \frac{[0.9(80)]^2}{40} = 129.6 \text{ kpsi}$$

$$b = -\frac{1}{3} \log \left(\frac{f S_{ut}}{S_e} \right) = -\frac{1}{3} \log \left[\frac{0.9(80)}{40} \right] = -0.0851$$

$$N = \left(\frac{S_f}{a} \right)^{1/b} = \left(\frac{S_f}{129.6} \right)^{-1/0.0851} \quad (1)$$

where S_f replaced σ_a in Eq. (6–16).

(a) The modified Goodman line is given by Eq. (6–46), p. 298, where the endurance limit S_e is used for infinite life. For finite life at $S_f > S_e$, replace S_e with S_f in Eq. (6–46) and rearrange giving

$$S_f = \frac{\sigma_a}{1 - \frac{\sigma_m}{S_{ut}}} = \frac{40}{1 - \frac{20}{80}} = 53.3 \text{ kpsi}$$

Substituting this into Eq. (1) yields

Answer
$$N = \left(\frac{53.3}{129.6} \right)^{-1/0.0851} \doteq 3.4(10^4) \text{ cycles}$$

(b) For Gerber, similar to part (a), from Eq. (6–47),

$$S_f = \frac{\sigma_a}{1 - \left(\frac{\sigma_m}{S_{ut}} \right)^2} = \frac{40}{1 - \left(\frac{20}{80} \right)^2} = 42.7 \text{ kpsi}$$

Again, from Eq. (1),

Answer
$$N = \left(\frac{42.7}{129.6} \right)^{-1/0.0851} \doteq 4.6(10^5) \text{ cycles}$$

Comparing the answers, we see a large difference in the results. Again, the modified Goodman criterion is conservative as compared to Gerber for which the moderate difference in S_f is then magnified by a logarithmic S, N relationship.

For many *brittle* materials, the first quadrant fatigue failure criteria follows a concave upward Smith-Dolan locus represented by

$$\frac{S_a}{S_e} = \frac{1 - S_m/S_{ut}}{1 + S_m/S_{ut}} \quad (6-50)$$

or as a design equation,

$$\frac{n\sigma_a}{S_e} = \frac{1 - n\sigma_m/S_{ut}}{1 + n\sigma_m/S_{ut}} \quad (6-51)$$

For a radial load line of slope r , we substitute S_a/r for S_m in Eq. (6–50) and solve for S_a , obtaining

$$S_a = \frac{rS_{ut} + S_e}{2} \left[-1 + \sqrt{1 + \frac{4rS_{ut}S_e}{(rS_{ut} + S_e)^2}} \right] \quad (6-52)$$

The fatigue diagram for a brittle material differs markedly from that of a ductile material because:

- Yielding is not involved since the material may not have a yield strength.
- Characteristically, the compressive ultimate strength exceeds the ultimate tensile strength severalfold.

- First-quadrant fatigue failure locus is concave-upward (Smith-Dolan), for example, and as flat as Goodman. Brittle materials are more sensitive to midrange stress, being lowered, but compressive midrange stresses are beneficial.
- Not enough work has been done on brittle fatigue to discover insightful generalities, so we stay in the first and a bit of the second quadrant.

The most likely domain of designer use is in the range from $-S_{ut} \leq \sigma_m \leq S_{ut}$. The locus in the first quadrant is Goodman, Smith-Dolan, or something in between. The portion of the second quadrant that is used is represented by a straight line between the points $-S_{ut}$, S_{ut} and 0 , S_e , which has the equation

$$S_a = S_e + \left(\frac{S_e}{S_{ut}} - 1 \right) S_m \quad -S_{ut} \leq S_m \leq 0 \quad (\text{for cast iron}) \quad (6-53)$$

Table A–24 gives properties of gray cast iron. The endurance limit stated is really $k_a k_b S'_e$ and only corrections k_c , k_d , k_e , and k_f need be made. The average k_c for axial and torsional loading is 0.9.

EXAMPLE 6–13

A grade 30 gray cast iron is subjected to a load F applied to a 1 by $\frac{3}{8}$ -in cross-section link with a $\frac{1}{4}$ -in-diameter hole drilled in the center as depicted in Fig. 6–31a. The surfaces are machined. In the neighborhood of the hole, what is the factor of safety guarding against failure under the following conditions:

- The load $F = 1000$ lbf tensile, steady.
 - The load is 1000 lbf repeatedly applied.
 - The load fluctuates between -1000 lbf and 300 lbf without column action.
- Use the Smith-Dolan fatigue locus.

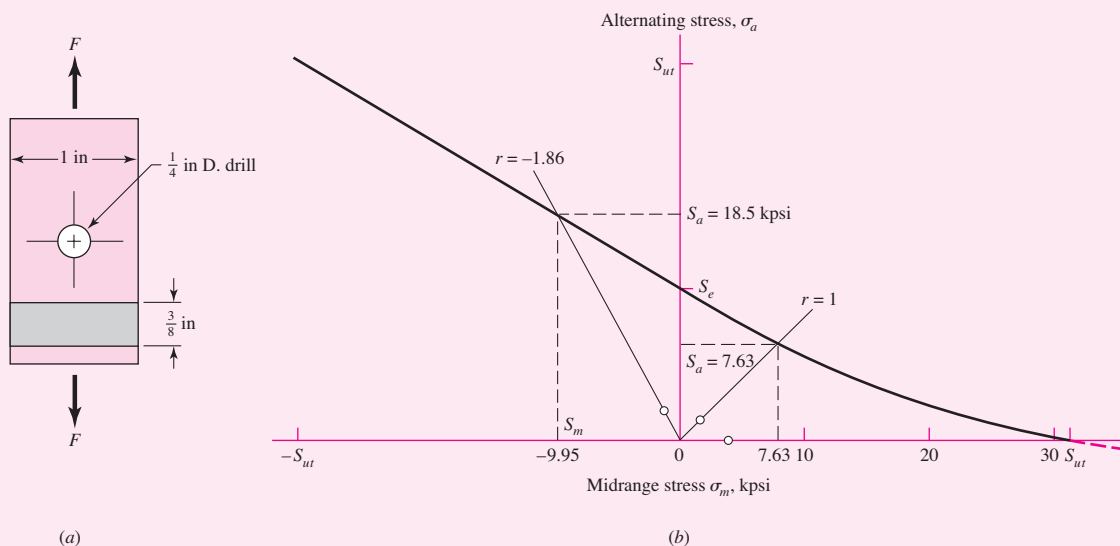


Figure 6–31

The grade 30 cast-iron part in axial fatigue with (a) its geometry displayed and (b) its designer's fatigue diagram for the circumstances of Ex. 6–13.

Solution Some preparatory work is needed. From Table A–24, $S_{ut} = 31$ kpsi, $S_{uc} = 109$ kpsi, $k_a k_b S'_e = 14$ kpsi. Since k_c for axial loading is 0.9, then $S_e = (k_a k_b S'_e) k_c = 14(0.9) = 12.6$ kpsi. From Table A–15–1, $A = t(w - d) = 0.375(1 - 0.25) = 0.281$ in², $d/w = 0.25/1 = 0.25$, and $K_t = 2.45$. The notch sensitivity for cast iron is 0.20 (see p. 288), so

$$K_f = 1 + q(K_t - 1) = 1 + 0.20(2.45 - 1) = 1.29$$

$$(a) \quad \sigma_a = \frac{K_f F_a}{A} = \frac{1.29(0)}{0.281} = 0 \quad \sigma_m = \frac{K_f F_m}{A} = \frac{1.29(1000)}{0.281} (10^{-3}) = 4.59 \text{ kpsi}$$

and

Answer
$$n = \frac{S_{ut}}{\sigma_m} = \frac{31.0}{4.59} = 6.75$$

$$(b) \quad F_a = F_m = \frac{F}{2} = \frac{1000}{2} = 500 \text{ lbf}$$

$$\sigma_a = \sigma_m = \frac{K_f F_a}{A} = \frac{1.29(500)}{0.281} (10^{-3}) = 2.30 \text{ kpsi}$$

$$r = \frac{\sigma_a}{\sigma_m} = 1$$

From Eq. (6–52),

$$S_a = \frac{(1)31 + 12.6}{2} \left[-1 + \sqrt{1 + \frac{4(1)31(12.6)}{[(1)31 + 12.6]^2}} \right] = 7.63 \text{ kpsi}$$

Answer
$$n = \frac{S_a}{\sigma_a} = \frac{7.63}{2.30} = 3.32$$

$$(c) \quad F_a = \frac{1}{2} |300 - (-1000)| = 650 \text{ lbf} \quad \sigma_a = \frac{1.29(650)}{0.281} (10^{-3}) = 2.98 \text{ kpsi}$$

$$F_m = \frac{1}{2} [300 + (-1000)] = -350 \text{ lbf} \quad \sigma_m = \frac{1.29(-350)}{0.281} (10^{-3}) = -1.61 \text{ kpsi}$$

$$r = \frac{\sigma_a}{\sigma_m} = \frac{3.0}{-1.61} = -1.86$$

From Eq. (6–53), $S_a = S_e + (S_e/S_{ut} - 1)S_m$ and $S_m = S_a/r$. It follows that

$$S_a = \frac{S_e}{1 - \frac{1}{r} \left(\frac{S_e}{S_{ut}} - 1 \right)} = \frac{12.6}{1 - \frac{1}{-1.86} \left(\frac{12.6}{31} - 1 \right)} = 18.5 \text{ kpsi}$$

Answer
$$n = \frac{S_a}{\sigma_a} = \frac{18.5}{2.98} = 6.20$$

Figure 6–31b shows the portion of the designer's fatigue diagram that was constructed.

6-13 Torsional Fatigue Strength under Fluctuating Stresses

Extensive tests by Smith²³ provide some very interesting results on pulsating torsional fatigue. Smith's first result, based on 72 tests, shows that the existence of a torsional steady-stress component not more than the torsional yield strength has no effect on the torsional endurance limit, provided the material is *ductile, polished, notch-free, and cylindrical*.

Smith's second result applies to materials with stress concentration, notches, or surface imperfections. In this case, he finds that the torsional fatigue limit decreases monotonically with torsional steady stress. Since the great majority of parts will have surfaces that are less than perfect, this result indicates Gerber, ASME-elliptic, and other approximations are useful. Joerres of Associated Spring-Barnes Group, confirms Smith's results and recommends the use of the modified Goodman relation for pulsating torsion. In constructing the Goodman diagram, Joerres uses

$$S_{su} = 0.67S_{ut} \quad (6-54)$$

Also, from Chap. 5, $S_{sy} = 0.577S_{yt}$ from distortion-energy theory, and the mean load factor k_c is given by Eq. (6-26), or 0.577. This is discussed further in Chap. 10.

6-14 Combinations of Loading Modes

It may be helpful to think of fatigue problems as being in three categories:

- Completely reversing simple loads
- Fluctuating simple loads
- *Combinations of loading modes*

The simplest category is that of a completely reversed single stress which is handled with the S - N diagram, relating the alternating stress to a life. Only one type of loading is allowed here, and the midrange stress must be zero. The next category incorporates general fluctuating loads, using a criterion to relate midrange and alternating stresses (modified Goodman, Gerber, ASME-elliptic, or Soderberg). Again, only *one* type of loading is allowed at a time. The third category, which we will develop in this section, involves cases where there are combinations of different types of loading, such as combined bending, torsion, and axial.

In Sec. 6-9 we learned that a load factor k_c is used to obtain the endurance limit, and hence the result is dependent on whether the loading is axial, bending, or torsion. In this section we want to answer the question, "How do we proceed when the loading is a *mixture* of, say, axial, bending, and torsional loads?" This type of loading introduces a few complications in that there may now exist combined normal and shear stresses, each with alternating and midrange values, and several of the factors used in determining the endurance limit depend on the type of loading. There may also be multiple stress-concentration factors, one for each mode of loading. The problem of how to deal with combined stresses was encountered when developing static failure theories. The distortion energy failure theory proved to be a satisfactory method of combining the

²³James O. Smith, "The Effect of Range of Stress on the Fatigue Strength of Metals," *Univ. of Ill. Eng. Exp. Sta. Bull.* 334, 1942.

multiple stresses on a stress element into a single equivalent von Mises stress. The same approach will be used here.

The first step is to generate *two* stress elements—one for the alternating stresses and one for the midrange stresses. Apply the appropriate fatigue stress concentration factors to each of the stresses; i.e., apply $(K_f)_{\text{bending}}$ for the bending stresses, $(K_{fs})_{\text{torsion}}$ for the torsional stresses, and $(K_f)_{\text{axial}}$ for the axial stresses. Next, calculate an equivalent von Mises stress for each of these two stress elements, σ'_a and σ'_m . Finally, select a fatigue failure criterion (modified Goodman, Gerber, ASME-elliptic, or Soderberg) to complete the fatigue analysis. For the endurance limit, S_e , use the endurance limit modifiers, k_a , k_b , and k_c , for bending. The torsional load factor, $k_c = 0.59$ should not be applied as it is already accounted for in the von Mises stress calculation (see footnote 17 on page 282). The load factor for the axial load can be accounted for by dividing the alternating axial stress by the axial load factor of 0.85. For example, consider the common case of a shaft with bending stresses, torsional shear stresses, and axial stresses. For this case, the von Mises stress is of the form $\sigma' = (\sigma_x^2 + 3\tau_{xy}^2)^{1/2}$. Considering that the bending, torsional, and axial stresses have alternating and midrange components, the von Mises stresses for the two stress elements can be written as

$$\sigma'_a = \left\{ \left[(K_f)_{\text{bending}}(\sigma_a)_{\text{bending}} + (K_f)_{\text{axial}} \frac{(\sigma_a)_{\text{axial}}}{0.85} \right]^2 + 3 \left[(K_{fs})_{\text{torsion}}(\tau_a)_{\text{torsion}} \right]^2 \right\}^{1/2} \quad (6-55)$$

$$\sigma'_m = \left\{ \left[(K_f)_{\text{bending}}(\sigma_m)_{\text{bending}} + (K_f)_{\text{axial}}(\sigma_m)_{\text{axial}} \right]^2 + 3 \left[(K_{fs})_{\text{torsion}}(\tau_m)_{\text{torsion}} \right]^2 \right\}^{1/2} \quad (6-56)$$

For first-cycle localized yielding, the maximum von Mises stress is calculated. This would be done by first adding the axial and bending alternating and midrange stresses to obtain σ_{max} and adding the alternating and midrange shear stresses to obtain τ_{max} . Then substitute σ_{max} and τ_{max} into the equation for the von Mises stress. A simpler and more conservative method is to add Eq. (6-55) and Eq. (6-56). That is, let $\sigma'_{\text{max}} \doteq \sigma'_a + \sigma'_m$.

If the stress components are not in phase but have the same frequency, the maxima can be found by expressing each component in trigonometric terms, using phase angles, and then finding the sum. If two or more stress components have differing frequencies, the problem is difficult; one solution is to assume that the two (or more) components often reach an in-phase condition, so that their magnitudes are additive.

EXAMPLE 6-14

A rotating shaft is made of 42- × 4-mm AISI 1018 cold-drawn steel tubing and has a 6-mm-diameter hole drilled transversely through it. Estimate the factor of safety guarding against fatigue and static failures using the Gerber and Langer failure criteria for the following loading conditions:

- The shaft is subjected to a completely reversed torque of 120 N · m in phase with a completely reversed bending moment of 150 N · m.
- The shaft is subjected to a pulsating torque fluctuating from 20 to 160 N · m and a steady bending moment of 150 N · m.

Solution

Here we follow the procedure of estimating the strengths and then the stresses, followed by relating the two.

From Table A–20 we find the minimum strengths to be $S_{ut} = 440$ MPa and $S_y = 370$ MPa. The endurance limit of the rotating-beam specimen is $0.5(440) = 220$ MPa. The surface factor, obtained from Eq. (6–19) and Table 6–2, p. 279 is

$$k_a = 4.51S_{ut}^{-0.265} = 4.51(440)^{-0.265} = 0.899$$

From Eq. (6–20) the size factor is

$$k_b = \left(\frac{d}{7.62}\right)^{-0.107} = \left(\frac{42}{7.62}\right)^{-0.107} = 0.833$$

The remaining Marin factors are all unity, so the modified endurance strength S_e is

$$S_e = 0.899(0.833)220 = 165 \text{ MPa}$$

(a) Theoretical stress-concentration factors are found from Table A–16. Using $a/D = 6/42 = 0.143$ and $d/D = 34/42 = 0.810$, and using linear interpolation, we obtain $A = 0.798$ and $K_t = 2.366$ for bending; and $A = 0.89$ and $K_{ts} = 1.75$ for torsion. Thus, for bending,

$$Z_{\text{net}} = \frac{\pi A}{32D}(D^4 - d^4) = \frac{\pi(0.798)}{32(42)}[(42)^4 - (34)^4] = 3.31(10^3)\text{mm}^3$$

and for torsion

$$J_{\text{net}} = \frac{\pi A}{32}(D^4 - d^4) = \frac{\pi(0.89)}{32}[(42)^4 - (34)^4] = 155(10^3)\text{mm}^4$$

Next, using Figs. 6–20 and 6–21, pp. 287–288, with a notch radius of 3 mm we find the notch sensitivities to be 0.78 for bending and 0.96 for torsion. The two corresponding fatigue stress-concentration factors are obtained from Eq. (6–32) as

$$K_f = 1 + q(K_t - 1) = 1 + 0.78(2.366 - 1) = 2.07$$

$$K_{fs} = 1 + 0.96(1.75 - 1) = 1.72$$

The alternating bending stress is now found to be

$$\sigma_{xa} = K_f \frac{M}{Z_{\text{net}}} = 2.07 \frac{150}{3.31(10^{-6})} = 93.8(10^6)\text{Pa} = 93.8 \text{ MPa}$$

and the alternating torsional stress is

$$\tau_{xya} = K_{fs} \frac{TD}{2J_{\text{net}}} = 1.72 \frac{120(42)(10^{-3})}{2(155)(10^{-9})} = 28.0(10^6)\text{Pa} = 28.0 \text{ MPa}$$

The midrange von Mises component σ'_m is zero. The alternating component σ'_a is given by

$$\sigma'_a = (\sigma_{xa}^2 + 3\tau_{xya}^2)^{1/2} = [93.8^2 + 3(28^2)]^{1/2} = 105.6 \text{ MPa}$$

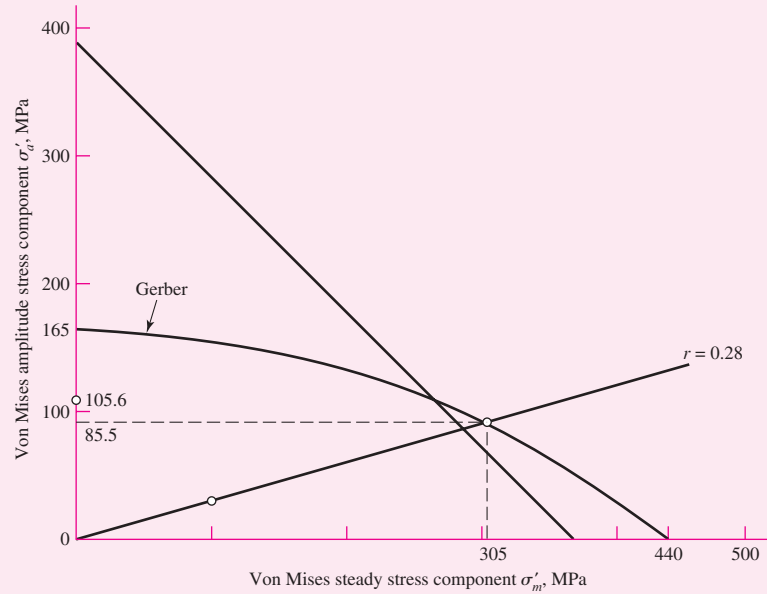
Since $S_e = S_a$, the fatigue factor of safety n_f is

$$n_f = \frac{S_a}{\sigma'_a} = \frac{165}{105.6} = 1.56$$

Answer

312 Mechanical Engineering Design

Figure 6–32

 Designer's fatigue diagram for
 Ex. 6–14.


The first-cycle yield factor of safety is

Answer

$$n_y = \frac{S_y}{\sigma'_a} = \frac{370}{105.6} = 3.50$$

There is no localized yielding; the threat is from fatigue. See Fig. 6–32.

(b) This part asks us to find the factors of safety when the alternating component is due to pulsating torsion, and a steady component is due to both torsion and bending. We have $T_a = (160 - 20)/2 = 70 \text{ N} \cdot \text{m}$ and $T_m = (160 + 20)/2 = 90 \text{ N} \cdot \text{m}$. The corresponding amplitude and steady-stress components are

$$\tau_{xya} = K_{fs} \frac{T_a D}{2J_{\text{net}}} = 1.72 \frac{70(42)(10^{-3})}{2(155)(10^{-9})} = 16.3(10^6) \text{ Pa} = 16.3 \text{ MPa}$$

$$\tau_{xym} = K_{fs} \frac{T_m D}{2J_{\text{net}}} = 1.72 \frac{90(42)(10^{-3})}{2(155)(10^{-9})} = 21.0(10^6) \text{ Pa} = 21.0 \text{ MPa}$$

 The steady bending stress component σ_{xm} is

$$\sigma_{xm} = K_f \frac{M_m}{Z_{\text{net}}} = 2.07 \frac{150}{3.31(10^{-6})} = 93.8(10^6) \text{ Pa} = 93.8 \text{ MPa}$$

 The von Mises components σ'_a and σ'_m are

$$\sigma'_a = [3(16.3)^2]^{1/2} = 28.2 \text{ MPa}$$

$$\sigma'_m = [93.8^2 + 3(21)^2]^{1/2} = 100.6 \text{ MPa}$$

From Table 6–7, p. 299, the fatigue factor of safety is

Answer

$$n_f = \frac{1}{2} \left(\frac{440}{100.6} \right)^2 \frac{28.2}{165} \left\{ -1 + \sqrt{1 + \left[\frac{2(100.6)165}{440(28.2)} \right]^2} \right\} = 3.03$$

From the same table, with $r = \sigma'_a / \sigma'_m = 28.2 / 100.6 = 0.280$, the strengths can be shown to be $S_a = 85.5$ MPa and $S_m = 305$ MPa. See the plot in Fig. 6–32.

The first-cycle yield factor of safety n_y is

Answer

$$n_y = \frac{S_y}{\sigma'_a + \sigma'_m} = \frac{370}{28.2 + 100.6} = 2.87$$

There is no notch yielding. The likelihood of failure may first come from first-cycle yielding at the notch. See the plot in Fig. 6–32.

6–15 Varying, Fluctuating Stresses; Cumulative Fatigue Damage

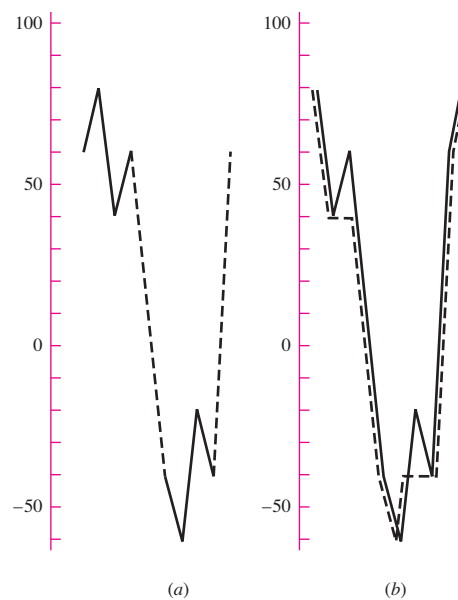
Instead of a single fully reversed stress history block composed of n cycles, suppose a machine part, at a critical location, is subjected to

- A fully reversed stress σ_1 for n_1 cycles, σ_2 for n_2 cycles, . . . , or
- A “wiggly” time line of stress exhibiting many and different peaks and valleys.

What stresses are significant, what counts as a cycle, and what is the measure of damage incurred? Consider a fully reversed cycle with stresses varying 60, 80, 40, and 60 kpsi and a second fully reversed cycle $-40, -60, -20,$ and -40 kpsi as depicted in Fig. 6–33*a*. First, it is clear that to impose the pattern of stress in Fig. 6–33*a* on a part it is necessary that the time trace look like the solid line plus the dashed line in Fig. 6–33*a*. Figure 6–33*b* moves the snapshot to exist beginning with 80 kpsi and ending with 80 kpsi. Acknowledging the existence of a single stress-time trace is to discover a “hidden” cycle shown as the dashed line in Fig. 6–33*b*. If there are 100 applications of the all-positive stress cycle, then 100 applications of the all-negative stress cycle, the

Figure 6–33

Variable stress diagram prepared for assessing cumulative damage.



hidden cycle is applied but once. If the all-positive stress cycle is applied alternately with the all-negative stress cycle, the hidden cycle is applied 100 times.

To ensure that the hidden cycle is not lost, begin on the snapshot with the largest (or smallest) stress and add previous history to the right side, as was done in Fig. 6–33*b*. Characterization of a cycle takes on a max–min–same max (or min–max–same min) form. We identify the hidden cycle first by moving along the dashed-line trace in Fig. 6–33*b* identifying a cycle with an 80-kpsi max, a 60-kpsi min, and returning to 80 kpsi. Mentally deleting the used part of the trace (the dashed line) leaves a 40, 60, 40 cycle and a –40, –20, –40 cycle. Since failure loci are expressed in terms of stress amplitude component σ_a and steady component σ_m , we use Eq. (6–36) to construct the table below:

Cycle Number	σ_{\max}	σ_{\min}	σ_a	σ_m
1	80	–60	70	10
2	60	40	10	50
3	–20	–40	10	–30

The most damaging cycle is number 1. It could have been lost.

Methods for counting cycles include:

- Number of tensile peaks to failure.
- All maxima above the waveform mean, all minima below.
- The global maxima between crossings above the mean and the global minima between crossings below the mean.
- All positive slope crossings of levels above the mean, and all negative slope crossings of levels below the mean.
- A modification of the preceding method with only one count made between successive crossings of a level associated with each counting level.
- Each local maxi-min excursion is counted as a half-cycle, and the associated amplitude is half-range.
- The preceding method plus consideration of the local mean.
- Rain-flow counting technique.

The method used here amounts to a variation of the *rain-flow counting technique*.

The *Palmgren-Miner*²⁴ *cycle-ratio summation rule*, also called *Miner's rule*, is written

$$\sum \frac{n_i}{N_i} = c \tag{6-57}$$

where n_i is the number of cycles at stress level σ_i and N_i is the number of cycles to failure at stress level σ_i . The parameter c has been determined by experiment; it is usually found in the range $0.7 < c < 2.2$ with an average value near unity.

²⁴A. Palmgren, “Die Lebensdauer von Kugellagern,” *ZVDI*, vol. 68, pp. 339–341, 1924; M. A. Miner, “Cumulative Damage in Fatigue,” *J. Appl. Mech.*, vol. 12, *Trans. ASME*, vol. 67, pp. A159–A164, 1945.

Using the deterministic formulation as a linear damage rule we write

$$D = \sum \frac{n_i}{N_i} \quad (6-58)$$

where D is the accumulated damage. When $D = c = 1$, failure ensues.

EXAMPLE 6-15

Given a part with $S_{ut} = 151$ kpsi and at the critical location of the part, $S_e = 67.5$ kpsi. For the loading of Fig. 6-33, estimate the number of repetitions of the stress-time block in Fig. 6-33 that can be made before failure.

Solution From Fig. 6-18, p. 277, for $S_{ut} = 151$ kpsi, $f = 0.795$. From Eq. (6-14),

$$a = \frac{(f S_{ut})^2}{S_e} = \frac{[0.795(151)]^2}{67.5} = 213.5 \text{ kpsi}$$

From Eq. (6-15),

$$b = -\frac{1}{3} \log \left(\frac{f S_{ut}}{S_e} \right) = -\frac{1}{3} \log \left[\frac{0.795(151)}{67.5} \right] = -0.0833$$

So,

$$S_f = 213.5 N^{-0.0833} \quad N = \left(\frac{S_f}{213.5} \right)^{-1/0.0833} \quad (1), (2)$$

We prepare to add two columns to the previous table. Using the Gerber fatigue criterion, Eq. (6-47), p. 298, with $S_e = S_f$, and $n = 1$, we can write

$$S_f = \begin{cases} \frac{\sigma_a}{1 - (\sigma_m/S_{ut})^2} & \sigma_m > 0 \\ S_e & \sigma_m \leq 0 \end{cases} \quad (3)$$

Cycle 1: $r = \sigma_a/\sigma_m = 70/10 = 7$, and the strength amplitude from Table 6-7, p. 299, is

$$S_a = \frac{7^2 151^2}{2(67.5)} \left\{ -1 + \sqrt{1 + \left[\frac{2(67.5)}{7(151)} \right]^2} \right\} = 67.2 \text{ kpsi}$$

Since $\sigma_a > S_a$, that is, $70 > 67.2$, life is reduced. From Eq. (3),

$$S_f = \frac{70}{1 - (10/151)^2} = 70.3 \text{ kpsi}$$

and from Eq. (2)

$$N = \left(\frac{70.3}{213.5} \right)^{-1/0.0833} = 619(10^3) \text{ cycles}$$

Cycle 2: $r = 10/50 = 0.2$, and the strength amplitude is

$$S_a = \frac{0.2^2 151^2}{2(67.5)} \left\{ -1 + \sqrt{1 + \left[\frac{2(67.5)}{0.2(151)} \right]^2} \right\} = 24.2 \text{ kpsi}$$

Since $\sigma_a < S_a$, that is $10 < 24.2$, then $S_f = S_e$ and indefinite life follows. Thus, $N \rightarrow \infty$.

Cycle 3: $r = 10/-30 = -0.333$, and since $\sigma_m < 0$, $S_f = S_e$, indefinite life follows and $N \rightarrow \infty$

Cycle Number	S_f , kpsi	N , cycles
1	70.3	$619(10^3)$
2	67.5	∞
3	67.5	∞

From Eq. (6–58) the damage per block is

$$D = \sum \frac{n_i}{N_i} = N \left[\frac{1}{619(10^3)} + \frac{1}{\infty} + \frac{1}{\infty} \right] = \frac{N}{619(10^3)}$$

Answer Setting $D = 1$ yields $N = 619(10^3)$ cycles.

To further illustrate the use of the Miner rule, let us choose a steel having the properties $S_{ut} = 80$ kpsi, $S'_{e,0} = 40$ kpsi, and $f = 0.9$, where we have used the designation $S'_{e,0}$ instead of the more usual S'_e to indicate the endurance limit of the *virgin*, or *undamaged, material*. The log S –log N diagram for this material is shown in Fig. 6–34 by the heavy solid line. Now apply, say, a reversed stress $\sigma_1 = 60$ kpsi for $n_1 = 3000$ cycles. Since $\sigma_1 > S'_{e,0}$, the endurance limit will be damaged, and we wish to find the new endurance limit $S'_{e,1}$ of the damaged material using the Miner rule. The equation of the virgin material failure line in Fig. 6–34 in the 10^3 to 10^6 cycle range is

$$S_f = aN^b = 129.6N^{-0.085\ 091}$$

The cycles to failure at stress level $\sigma_1 = 60$ kpsi are

$$N_1 = \left(\frac{\sigma_1}{129.6} \right)^{-1/0.085\ 091} = \left(\frac{60}{129.6} \right)^{-1/0.085\ 091} = 8520 \text{ cycles}$$

Figure 6–34

Use of the Miner rule to predict the endurance limit of a material that has been overstressed for a finite number of cycles.

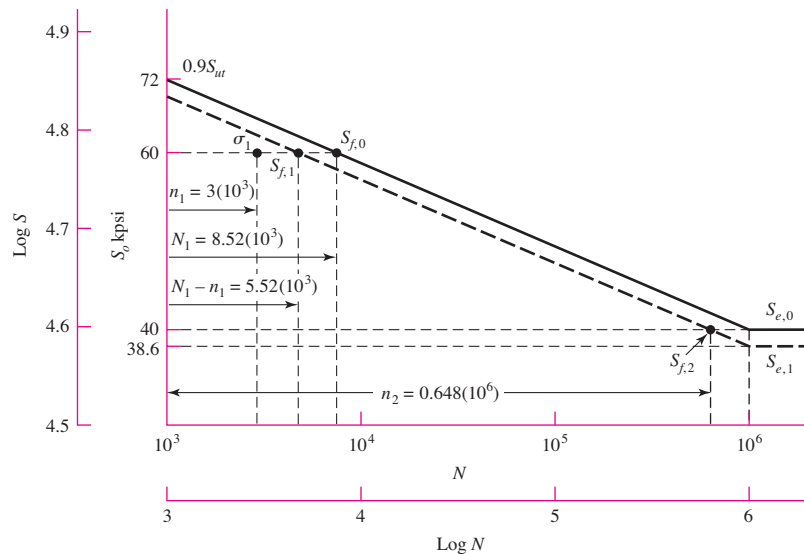


Figure 6–34 shows that the material has a life $N_1 = 8520$ cycles at 60 kpsi, and consequently, after the application of σ_1 for 3000 cycles, there are $N_1 - n_1 = 5520$ cycles of life remaining at σ_1 . This locates the finite-life strength $S_{f,1}$ of the damaged material, as shown in Fig. 6–34. To get a second point, we ask the question: With n_1 and N_1 given, how many cycles of stress $\sigma_2 = S'_{e,0}$ can be applied before the damaged material fails?

This corresponds to n_2 cycles of stress reversal, and hence, from Eq. (6–58), we have

$$\frac{n_1}{N_1} + \frac{n_2}{N_2} = 1 \quad (a)$$

or

$$n_2 = \left(1 - \frac{n_1}{N_1}\right) N_2 \quad (b)$$

Then

$$n_2 = \left[1 - \frac{3(10)^3}{8.52(10)^3}\right] (10^6) = 0.648(10^6) \text{ cycles}$$

This corresponds to the finite-life strength $S_{f,2}$ in Fig. 6–34. A line through $S_{f,1}$ and $S_{f,2}$ is the log S –log N diagram of the damaged material according to the Miner rule. The new endurance limit is $S_{e,1} = 38.6$ kpsi.

We could leave it at this, but a little more investigation can be helpful. We have two points on the new fatigue locus, $N_1 - n_1, \sigma_1$ and n_2, σ_2 . It is useful to prove that the slope of the new line is still b . For the equation $S_f = a'N^{b'}$, where the values of a' and b' are established by two points α and β . The equation for b' is

$$b' = \frac{\log \sigma_\alpha / \sigma_\beta}{\log N_\alpha / N_\beta} \quad (c)$$

Examine the denominator of Eq. (c):

$$\begin{aligned} \log \frac{N_\alpha}{N_\beta} &= \log \frac{N_1 - n_1}{n_2} = \log \frac{N_1 - n_1}{(1 - n_1/N_1)N_2} = \log \frac{N_1}{N_2} \\ &= \log \frac{(\sigma_1/a)^{1/b}}{(\sigma_2/a)^{1/b}} = \log \left(\frac{\sigma_1}{\sigma_2}\right)^{1/b} = \frac{1}{b} \log \left(\frac{\sigma_1}{\sigma_2}\right) \end{aligned}$$

Substituting this into Eq. (c) with $\sigma_\alpha/\sigma_\beta = \sigma_1/\sigma_2$ gives

$$b' = \frac{\log(\sigma_1/\sigma_2)}{(1/b) \log(\sigma_1/\sigma_2)} = b$$

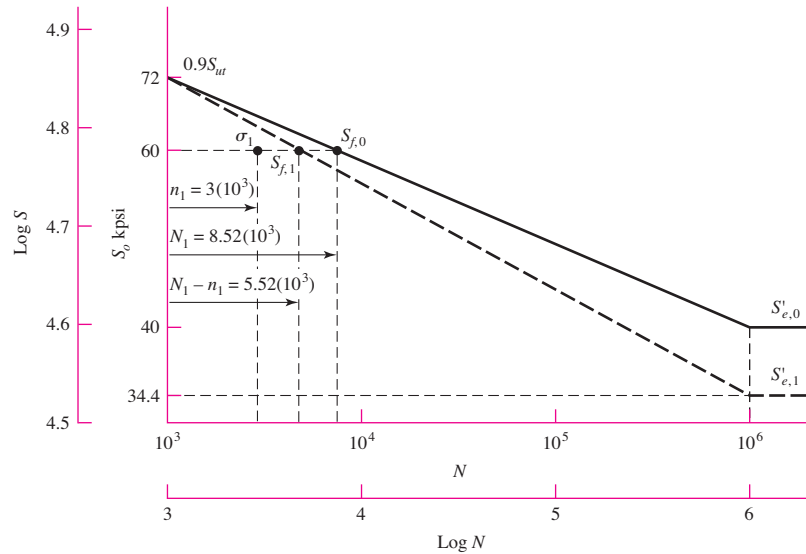
which means the damaged material line has the same slope as the virgin material line; therefore, the lines are parallel. This information can be helpful in writing a computer program for the Palmgren-Miner hypothesis.

Though the Miner rule is quite generally used, it fails in two ways to agree with experiment. First, note that this theory states that the static strength S_{ut} is damaged, that is, decreased, because of the application of σ_1 ; see Fig. 6–34 at $N = 10^3$ cycles. Experiments fail to verify this prediction.

The Miner rule, as given by Eq. (6–58), does not account for the order in which the stresses are applied, and hence ignores any stresses less than $S'_{e,0}$. But it can be seen in Fig. 6–34 that a stress σ_3 in the range $S'_{e,1} < \sigma_3 < S'_{e,0}$ would cause damage if applied after the endurance limit had been damaged by the application of σ_1 .

Figure 6-35

Use of the Manson method to predict the endurance limit of a material that has been overstressed for a finite number of cycles.



Manson's²⁵ approach overcomes both of the deficiencies noted for the Palmgren-Miner method; historically it is a much more recent approach, and it is just as easy to use. Except for a slight change, we shall use and recommend the Manson method in this book. Manson plotted the S - $\log N$ diagram instead of a $\log S$ - $\log N$ plot as is recommended here. Manson also resorted to experiment to find the point of convergence of the S - $\log N$ lines corresponding to the static strength, instead of arbitrarily selecting the intersection of $N = 10^3$ cycles with $S = 0.9S_{ut}$ as is done here. Of course, it is always better to use experiment, but our purpose in this book has been to use the simple test data to learn as much as possible about fatigue failure.

The method of Manson, as presented here, consists in having all $\log S$ - $\log N$ lines, that is, lines for both the damaged and the virgin material, converge to the same point, $0.9S_{ut}$ at 10^3 cycles. In addition, the $\log S$ - $\log N$ lines must be constructed in the same historical order in which the stresses occur.

The data from the preceding example are used for illustrative purposes. The results are shown in Fig. 6-35. Note that the strength $S_{f,1}$ corresponding to $N_1 - n_1 = 5.52(10^3)$ cycles is found in the same manner as before. Through this point and through $0.9S_{ut}$ at 10^3 cycles, draw the heavy dashed line to meet $N = 10^6$ cycles and define the endurance limit $S'_{e,1}$ of the damaged material. In this case the new endurance limit is 34.4 kpsi, somewhat less than that found by the Miner method.

It is now easy to see from Fig. 6-35 that a reversed stress $\sigma = 36$ kpsi, say, would not harm the endurance limit of the virgin material, no matter how many cycles it might be applied. However, if $\sigma = 36$ kpsi should be applied *after* the material was damaged by $\sigma_1 = 60$ kpsi, then additional damage would be done.

Both these rules involve a number of computations, which are repeated every time damage is estimated. For complicated stress-time traces, this might be every cycle. Clearly a computer program is useful to perform the tasks, including scanning the trace and identifying the cycles.

²⁵S. S. Manson, A. J. Nachtigall, C. R. Ensign, and J. C. Fresche, "Further Investigation of a Relation for Cumulative Fatigue Damage in Bending," *Trans. ASME, J. Eng. Ind.*, ser. B, vol. 87, No. 1, pp. 25-35, February 1965.

Collins said it well: “In spite of all the problems cited, the Palmgren linear damage rule is frequently used because of its simplicity and the experimental fact that other more complex damage theories do not always yield a significant improvement in failure prediction reliability.”²⁶

6-16 Surface Fatigue Strength

The surface fatigue mechanism is not definitively understood. The contact-affected zone, in the absence of surface shearing tractions, entertains compressive principal stresses. Rotary fatigue has its cracks grown at or near the surface in the presence of tensile stresses that are associated with crack propagation, to catastrophic failure. There are shear stresses in the zone, which are largest just below the surface. Cracks seem to grow from this stratum until small pieces of material are expelled, leaving pits on the surface. Because engineers had to design durable machinery before the surface fatigue phenomenon was understood in detail, they had taken the posture of conducting tests, observing pits on the surface, and declaring failure at an arbitrary projected area of hole, and they related this to the Hertzian contact pressure. This compressive stress did not produce the failure directly, but whatever the failure mechanism, whatever the stress type that was instrumental in the failure, the contact stress was an *index* to its magnitude.

Buckingham²⁷ conducted a number of tests relating the fatigue at 10^8 cycles to endurance strength (Hertzian contact pressure). While there is evidence of an endurance limit at about $3(10^7)$ cycles for cast materials, hardened steel rollers showed no endurance limit up to $4(10^8)$ cycles. Subsequent testing on hard steel shows no endurance limit. Hardened steel exhibits such high fatigue strengths that its use in resisting surface fatigue is widespread.

Our studies thus far have dealt with the failure of a machine element by yielding, by fracture, and by fatigue. The endurance limit obtained by the rotating-beam test is frequently called the *flexural endurance limit*, because it is a test of a rotating beam. In this section we shall study a property of *mating materials* called the *surface endurance shear*. The design engineer must frequently solve problems in which two machine elements mate with one another by rolling, sliding, or a combination of rolling and sliding contact. Obvious examples of such combinations are the mating teeth of a pair of gears, a cam and follower, a wheel and rail, and a chain and sprocket. A knowledge of the surface strength of materials is necessary if the designer is to create machines having a long and satisfactory life.

When two surfaces roll or roll and slide against one another with sufficient force, a pitting failure will occur after a certain number of cycles of operation. Authorities are not in complete agreement on the exact mechanism of the pitting; although the subject is quite complicated, they do agree that the Hertz stresses, the number of cycles, the surface finish, the hardness, the degree of lubrication, and the temperature all influence the strength. In Sec. 3–19 it was learned that, when two surfaces are pressed together, a maximum shear stress is developed slightly below the contacting surface. It is postulated by some authorities that a surface fatigue failure is initiated by this maximum shear stress and then is propagated rapidly to the surface. The lubricant then enters the crack that is formed and, under pressure, eventually wedges the chip loose.

²⁶J. A. Collins, *Failure of Materials in Mechanical Design*, John Wiley & Sons, New York, 1981, p. 243.

²⁷Earle Buckingham, *Analytical Mechanics of Gears*, McGraw-Hill, New York, 1949.

To determine the surface fatigue strength of mating materials, Buckingham designed a simple machine for testing a pair of contacting rolling surfaces in connection with his investigation of the wear of gear teeth. Buckingham and, later, Talbourdet gathered large numbers of data from many tests so that considerable design information is now available. To make the results useful for designers, Buckingham defined a *load-stress factor*, also called a *wear factor*, which is derived from the Hertz equations. Equations (3–73) and (3–74), pp. 118–119, for contacting cylinders are found to be

$$b = \sqrt{\frac{2F(1-\nu_1^2)/E_1 + (1-\nu_2^2)/E_2}{\pi l \left(\frac{1}{d_1} + \frac{1}{d_2} \right)}} \quad (6-59)$$

$$p_{\max} = \frac{2F}{\pi bl} \quad (6-60)$$

where b = half width of rectangular contact area

F = contact force

l = length of cylinders

ν = Poisson's ratio

E = modulus of elasticity

d = cylinder diameter

It is more convenient to use the cylinder radius, so let $2r = d$. If we then designate the length of the cylinders as w (for width of gear, bearing, cam, etc.) instead of l and remove the square root sign, Eq. (6–59) becomes

$$b^2 = \frac{4F}{\pi w} \frac{(1-\nu_1^2)/E_1 + (1-\nu_2^2)/E_2}{1/r_1 + 1/r_2} \quad (6-61)$$

We can define a *surface endurance strength* S_C using

$$p_{\max} = \frac{2F}{\pi bw} \quad (6-62)$$

as

$$S_C = \frac{2F}{\pi bw} \quad (6-63)$$

which may also be called *contact strength*, the *contact fatigue strength*, or the *Hertzian endurance strength*. The strength is the contacting pressure which, after a specified number of cycles, will cause failure of the surface. Such failures are often called *wear* because they occur over a very long time. They should not be confused with abrasive wear, however. By squaring Eq. (6–63), substituting b^2 from Eq. (6–61), and rearranging, we obtain

$$\frac{F}{w} \left(\frac{1}{r_1} + \frac{1}{r_2} \right) = \pi S_C^2 \left[\frac{1-\nu_1^2}{E_1} + \frac{1-\nu_2^2}{E_2} \right] = K_1 \quad (6-64)$$

The left expression consists of parameters a designer may seek to control independently. The central expression consists of material properties that come with the material and condition specification. The third expression is the parameter K_1 , Buckingham's load-stress factor, determined by a test fixture with values F , w , r_1 , r_2 and the number of

cycles associated with the first tangible evidence of fatigue. In gear studies a similar K factor is used:

$$K_g = \frac{K_1}{4} \sin \phi \quad (6-65)$$

where ϕ is the tooth pressure angle, and the term $[(1 - \nu_1^2)/E_1 + (1 - \nu_2^2)/E_2]$ is defined as $1/(\pi C_P^2)$, so that

$$S_C = C_P \sqrt{\frac{F}{w} \left(\frac{1}{r_1} + \frac{1}{r_2} \right)} \quad (6-66)$$

Buckingham and others reported K_1 for 10^8 cycles and nothing else. This gives only one point on the $S_C N$ curve. For cast metals this may be sufficient, but for wrought steels, heat-treated, some idea of the slope is useful in meeting design goals of other than 10^8 cycles.

Experiments show that K_1 versus N , K_g versus N , and S_C versus N data are rectified by loglog transformation. This suggests that

$$K_1 = \alpha_1 N^{\beta_1} \quad K_g = a N^b \quad S_C = \alpha N^\beta$$

The three exponents are given by

$$\beta_1 = \frac{\log(K_1/K_2)}{\log(N_1/N_2)} \quad b = \frac{\log(K_{g1}/K_{g2})}{\log(N_1/N_2)} \quad \beta = \frac{\log(S_{C1}/S_{C2})}{\log(N_1/N_2)} \quad (6-67)$$

Data on induction-hardened steel on steel give $(S_C)_{10^7} = 271$ kpsi and $(S_C)_{10^8} = 239$ kpsi, so β , from Eq. (6-67), is

$$\beta = \frac{\log(271/239)}{\log(10^7/10^8)} = -0.055$$

It may be of interest that the American Gear Manufacturers Association (AGMA) uses $\beta = -0.056$ between $10^4 < N < 10^{10}$ if the designer has no data to the contrary beyond 10^7 cycles.

A longstanding correlation in steels between S_C and H_B at 10^8 cycles is

$$(S_C)_{10^8} = \begin{cases} 0.4H_B - 10 \text{ kpsi} \\ 2.76H_B - 70 \text{ MPa} \end{cases} \quad (6-68)$$

AGMA uses

$$0.99(S_C)_{10^7} = 0.327H_B + 26 \text{ kpsi} \quad (6-69)$$

Equation (6-66) can be used in design to find an allowable surface stress by using a design factor. Since this equation is nonlinear in its stress-load transformation, the designer must decide if loss of function denotes inability to carry the load. If so, then to find the allowable stress, one divides the load F by the design factor n_d :

$$\sigma_C = C_P \sqrt{\frac{F}{wn_d} \left(\frac{1}{r_1} + \frac{1}{r_2} \right)} = \frac{C_P}{\sqrt{n_d}} \sqrt{\frac{F}{w} \left(\frac{1}{r_1} + \frac{1}{r_2} \right)} = \frac{S_C}{\sqrt{n_d}}$$

and $n_d = (S_C/\sigma_C)^2$. If the loss of function is focused on stress, then $n_d = S_C/\sigma_C$. It is recommended that an engineer

- Decide whether loss of function is failure to carry load or stress.
- Define the design factor and factor of safety accordingly.
- Announce what he or she is using and why.
- Be prepared to defend his or her position.

In this way everyone who is party to the communication knows what a design factor (or factor of safety) of 2 means and adjusts, if necessary, the judgmental perspective.

6-17 Stochastic Analysis²⁸

As already demonstrated in this chapter, there are a great many factors to consider in a fatigue analysis, much more so than in a static analysis. So far, each factor has been treated in a deterministic manner, and if not obvious, these factors are subject to variability and control the overall reliability of the results. When reliability is important, then fatigue testing must certainly be undertaken. There is no other way. Consequently, the methods of stochastic analysis presented here and in other sections of this book constitute guidelines that enable the designer to obtain a good understanding of the various issues involved and help in the development of a safe and reliable design.

In this section, key stochastic modifications to the deterministic features and equations described in earlier sections are provided in the same order of presentation.

Endurance Limit

To begin, a method for estimating endurance limits, the *tensile strength correlation method*, is presented. The ratio $\phi = S'_e / \bar{S}_{ut}$ is called the *fatigue ratio*.²⁹ For ferrous metals, most of which exhibit an endurance limit, the endurance limit is used as a numerator. For materials that do not show an endurance limit, an endurance strength at a specified number of cycles to failure is used and noted. Gough³⁰ reported the stochastic nature of the fatigue ratio ϕ for several classes of metals, and this is shown in Fig. 6-36. The first item to note is that the coefficient of variation is of the order 0.10 to 0.15, and the distribution varies for classes of metals. The second item to note is that Gough's data include materials of no interest to engineers. In the absence of testing, engineers use the correlation that ϕ represents to estimate the endurance limit S'_e from the mean ultimate strength \bar{S}_{ut} .

Gough's data are for ensembles of metals, some chosen for metallurgical interest, and include materials that are not commonly selected for machine parts. Mischke³¹ analyzed data for 133 common steels and treatments in varying diameters in rotating bending,³² and the result was

$$\phi = 0.445d^{-0.107}\mathbf{LN}(1, 0.138)$$

where d is the specimen diameter in inches and $\mathbf{LN}(1, 0.138)$ is a unit lognormal variate with a mean of 1 and a standard deviation (and coefficient of variation) of 0.138. For the standard R. R. Moore specimen,

$$\phi_{0.30} = 0.445(0.30)^{-0.107}\mathbf{LN}(1, 0.138) = 0.506\mathbf{LN}(1, 0.138)$$

²⁸Review Chap. 20 before reading this section.

²⁹From this point, since we will be dealing with statistical distributions in terms of means, standard deviations, etc. A key quantity, the ultimate strength, will here be presented by its mean value, \bar{S}_{ut} . This means that certain terms that were defined earlier in terms of the minimum value of S_{ut} will change slightly.

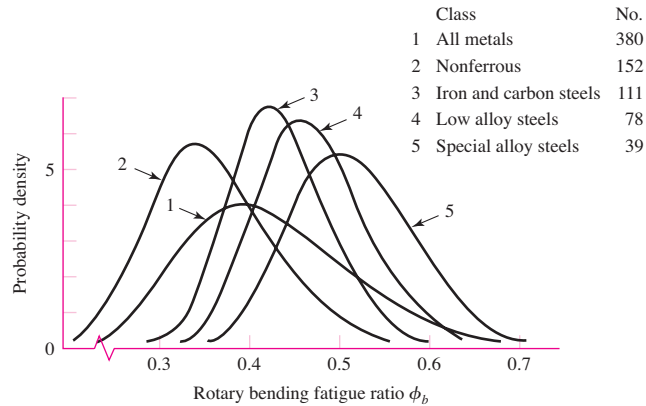
³⁰In J. A. Pope, *Metal Fatigue*, Chapman and Hall, London, 1959.

³¹Charles R. Mischke, "Prediction of Stochastic Endurance Strength," *Trans. ASME, Journal of Vibration, Acoustics, Stress, and Reliability in Design*, vol. 109, no. 1, January 1987, pp. 113–122.

³²Data from H. J. Grover, S. A. Gordon, and L. R. Jackson, *Fatigue of Metals and Structures*, Bureau of Naval Weapons, Document NAVWEPS 00-2500435, 1960.

Figure 6–36

The lognormal probability density PDF of the fatigue ratio ϕ_b of Gough.



Also, 25 plain carbon and low-alloy steels with $S_{ut} > 212$ kpsi are described by

$$S'_e = 107\text{LN}(1, 0.139) \text{ kpsi}$$

In summary, for the rotating-beam specimen,

$$S'_e = \begin{cases} 0.506\bar{S}_{ut}\text{LN}(1, 0.138) \text{ kpsi or MPa} & \bar{S}_{ut} \leq 212 \text{ kpsi (1460 MPa)} \\ 107\text{LN}(1, 0.139) \text{ kpsi} & \bar{S}_{ut} > 212 \text{ kpsi} \\ 740\text{LN}(1, 0.139) \text{ MPa} & \bar{S}_{ut} > 1460 \text{ MPa} \end{cases} \quad (6-70)$$

where \bar{S}_{ut} is the *mean* ultimate tensile strength.

Equations (6–70) represent the state of information before an engineer has chosen a material. In choosing, the designer has made a random choice from the ensemble of possibilities, and the statistics can give the odds of disappointment. If the testing is limited to finding an estimate of the ultimate tensile strength mean \bar{S}_{ut} with the chosen material, Eqs. (6–70) are directly helpful. If there is to be rotary-beam fatigue testing, then statistical information on the endurance limit is gathered and there is no need for the correlation above.

Table 6–9 compares approximate mean values of the fatigue ratio $\bar{\phi}_{0.30}$ for several classes of ferrous materials.

Endurance Limit Modifying Factors

A Marin equation can be written as

$$S_e = k_a k_b k_c k_d k_f S'_e \quad (6-71)$$

where the size factor k_b is deterministic and remains unchanged from that given in Sec. 6–9. Also, since we are performing a stochastic analysis, the “reliability factor” k_e is unnecessary here.

The surface factor k_a cited earlier in deterministic form as Eq. (6–20), p. 280, is now given in stochastic form by

$$k_a = a\bar{S}_{ut}^b \text{LN}(1, C) \quad (\bar{S}_{ut} \text{ in kpsi or MPa}) \quad (6-72)$$

where Table 6–10 gives values of a , b , and C for various surface conditions.

Table 6–9

Comparison of
Approximate Values of
Mean Fatigue Ratio for
Some Classes of Metals

Material Class	$\bar{\phi}_{0.30}$
Wrought steels	0.50
Cast steels	0.40
Powdered steels	0.38
Gray cast iron	0.35
Malleable cast iron	0.40
Normalized nodular cast iron	0.33

Table 6–10

Parameters in Marin
Surface Condition
Factor

Surface Finish	$k_a = \alpha S_{ut}^b \text{LN}(1, C)$			Coefficient of Variation, C
	kpsi	MPa	b	
Ground*	1.34	1.58	−0.086	0.120
Machined or Cold-rolled	2.67	4.45	−0.265	0.058
Hotrolled	14.5	58.1	−0.719	0.110
As-forged	39.8	271	−0.995	0.145

*Due to the wide scatter in ground surface data, an alternate function is $k_a = 0.878 \text{LN}(1, 0.120)$. Note: S_{ut} in kpsi or MPa.

EXAMPLE 6–16

A steel has a mean ultimate strength of 520 MPa and a machined surface. Estimate k_a .

Solution

From Table 6–10,

$$k_a = 4.45(520)^{-0.265} \text{LN}(1, 0.058)$$

$$\bar{k}_a = 4.45(520)^{-0.265}(1) = 0.848$$

$$\hat{\sigma}_{k_a} = C\bar{k}_a = (0.058)4.45(520)^{-0.265} = 0.049$$

Answer

so $k_a = \text{LN}(0.848, 0.049)$.

The load factor k_c for axial and torsional loading is given by

$$(k_c)_{\text{axial}} = 1.23 \bar{S}_{ut}^{-0.0778} \text{LN}(1, 0.125) \quad (6-73)$$

$$(k_c)_{\text{torsion}} = 0.328 \bar{S}_{ut}^{0.125} \text{LN}(1, 0.125) \quad (6-74)$$

where \bar{S}_{ut} is in kpsi. There are fewer data to study for axial fatigue. Equation (6–73) was deduced from the data of Landgraf and of Grover, Gordon, and Jackson (as cited earlier).

Torsional data are sparser, and Eq. (6–74) is deduced from data in Grover et al. Notice the mild sensitivity to strength in the axial and torsional load factor, so k_c in these cases is not constant. Average values are shown in the last column of Table 6–11, and as footnotes to Tables 6–12 and 6–13. Table 6–14 shows the influence of material classes on the load factor k_c . Distortion energy theory predicts $(k_c)_{\text{torsion}} = 0.577$ for materials to which the distortion-energy theory applies. For bending, $k_c = \text{LN}(1, 0)$.

Table 6-11Parameters in Marin
Loading Factor

Mode of Loading	$k_c = \alpha \bar{S}_{ut}^\beta \text{LN}(1, C)$				Average k_c	
	kpsi	α	MPa	β		C
Bending	1	1	1	0	0	1
Axial	1.23	1.43	1.43	-0.0778	0.125	0.85
Torsion	0.328	0.258	0.258	0.125	0.125	0.59

Table 6-12Average Marin Loading
Factor for Axial Load

\bar{S}_{ut} , kpsi	k_c^*
50	0.907
100	0.860
150	0.832
200	0.814

*Average entry 0.85.

Table 6-13Average Marin Loading
Factor for Torsional Load

\bar{S}_{ut} , kpsi	k_c^*
50	0.535
100	0.583
150	0.614
200	0.636

*Average entry 0.59.

Table 6-14Average Marin Torsional
Loading Factor k_c for
Several Materials

Material	Range	n	\bar{k}_c	$\hat{\sigma}_{k_c}$
Wrought steels	0.52–0.69	31	0.60	0.03
Wrought Al	0.43–0.74	13	0.55	0.09
Wrought Cu and alloy	0.41–0.67	7	0.56	0.10
Wrought Mg and alloy	0.49–0.60	2	0.54	0.08
Titanium	0.37–0.57	3	0.48	0.12
Cast iron	0.79–1.01	9	0.90	0.07
Cast Al, Mg, and alloy	0.71–0.91	5	0.85	0.09

Source: The table is an extension of P. G. Forrest, *Fatigue of Metals*, Pergamon Press, London, 1962, Table 17, p. 110, with standard deviations estimated from range and sample size using Table A-1 in J. B. Kennedy and A. M. Neville, *Basic Statistical Methods for Engineers and Scientists*, 3rd ed., Harper & Row, New York, 1986, pp. 54–55.

EXAMPLE 6-17

Estimate the Marin loading factor k_c for a 1-in-diameter bar that is used as follows.
 (a) In bending. It is made of steel with $S_{ut} = 100\text{LN}(1, 0.035)$ kpsi, and the designer intends to use the correlation $S'_e = \Phi_{0.30}\bar{S}_{ut}$ to predict S'_e .
 (b) In bending, but endurance testing gave $S'_e = 55\text{LN}(1, 0.081)$ kpsi.
 (c) In push-pull (axial) fatigue, $S_{ut} = \text{LN}(86.2, 3.92)$ kpsi, and the designer intended to use the correlation $S'_e = \Phi_{0.30}\bar{S}_{ut}$.
 (d) In torsional fatigue. The material is cast iron, and S'_e is known by test.

Solution (a) Since the bar is in bending,

Answer
$$k_c = (1, 0)$$

(b) Since the test is in bending and use is in bending,

Answer
$$k_c = (1, 0)$$

(c) From Eq. (6-73),

Answer
$$\begin{aligned} (k_c)_{ax} &= 1.23(86.2)^{-0.0778}\text{LN}(1, 0.125) \\ \bar{k}_c &= 1.23(86.2)^{-0.0778}(1) = 0.870 \\ \hat{\sigma}_{kc} &= C\bar{k}_c = 0.125(0.870) = 0.109 \end{aligned}$$

(d) From Table 6-15, $\bar{k}_c = 0.90$, $\hat{\sigma}_{kc} = 0.07$, and

Answer
$$C_{kc} = \frac{0.07}{0.90} = 0.08$$

The temperature factor k_d is

$$k_d = \bar{k}_d\text{LN}(1, 0.11) \tag{6-75}$$

where $\bar{k}_d = k_d$, given by Eq. (6-27), p. 283.

Finally, k_f is, as before, the miscellaneous factor that can come about from a great many considerations, as discussed in Sec. 6-9, where now statistical distributions, possibly from testing, are considered.

Stress Concentration and Notch Sensitivity

Notch sensitivity q was defined by Eq. (6-31), p. 287. The stochastic equivalent is

$$\mathbf{q} = \frac{\mathbf{K}_f - 1}{K_t - 1} \tag{6-76}$$

where K_t is the theoretical (or geometric) stress-concentration factor, a deterministic quantity. A study of lines 3 and 4 of Table 20-6, will reveal that adding a scalar to (or subtracting one from) a variate \mathbf{x} will affect only the mean. Also, multiplying (or dividing) by a scalar affects both the mean and standard deviation. With this in mind, we can

Table 6-15

Heywood's Parameter \sqrt{a} and coefficients of variation C_{Kf} for steels

Notch Type	$\sqrt{a}(\sqrt{\text{in}})$, S_{ut} in kpsi	$\sqrt{a}(\sqrt{\text{mm}})$, S_{ut} in MPa	Coefficient of Variation C_{Kf}
Transverse hole	$5/S_{ut}$	$174/S_{ut}$	0.10
Shoulder	$4/S_{ut}$	$139/S_{ut}$	0.11
Groove	$3/S_{ut}$	$104/S_{ut}$	0.15

relate the statistical parameters of the fatigue stress-concentration factor \mathbf{K}_f to those of notch sensitivity \mathbf{q} . It follows that

$$\mathbf{q} = \text{LN} \left(\frac{\bar{K}_f - 1}{K_t - 1}, \frac{C\bar{K}_f}{K_t - 1} \right)$$

where $C = C_{Kf}$ and

$$\begin{aligned} \bar{q} &= \frac{\bar{K}_f - 1}{K_t - 1} \\ \hat{\sigma}_q &= \frac{C\bar{K}_f}{K_t - 1} \\ C_q &= \frac{C\bar{K}_f}{\bar{K}_f - 1} \end{aligned} \quad (6-77)$$

The fatigue stress-concentration factor \mathbf{K}_f has been investigated more in England than in the United States. For \bar{K}_f , consider a modified Neuber equation (after Heywood³³), where the fatigue stress-concentration factor is given by

$$\bar{K}_f = \frac{K_t}{1 + \frac{2(K_t - 1)\sqrt{a}}{K_t\sqrt{r}}} \quad (6-78)$$

where Table 6-15 gives values of \sqrt{a} and C_{Kf} for steels with transverse holes, shoulders, or grooves. Once \mathbf{K}_f is described, \mathbf{q} can also be quantified using the set Eqs. (6-77).

The modified Neuber equation gives the fatigue stress concentration factor as

$$\mathbf{K}_f = \bar{K}_f \text{LN} (1, C_{Kf}) \quad (6-79)$$

³³R. B. Heywood, *Designing Against Fatigue*, Chapman & Hall, London, 1962.

EXAMPLE 6-18

Estimate \mathbf{K}_f and \mathbf{q} for the steel shaft given in Ex. 6-6, p. 288.

Solution

From Ex. 6-6, a steel shaft with $S_{ut} = 690$ Mpa and a shoulder with a fillet of 3 mm was found to have a theoretical stress-concentration-factor of $K_t \doteq 1.65$. From Table 6-15,

$$\sqrt{a} = \frac{139}{S_{ut}} = \frac{139}{690} = 0.2014\sqrt{\text{mm}}$$

From Eq. (6–78),

$$K_f = \frac{K_t}{1 + \frac{2(K_t - 1)\sqrt{a}}{K_t\sqrt{r}}} = \frac{1.65}{1 + \frac{2(1.65 - 1)0.2014}{1.65\sqrt{3}}} = 1.51$$

which is 2.5 percent lower than what was found in Ex. 6–6.

From Table 6–15, $C_{Kf} = 0.11$. Thus from Eq. (6–79),

Answer
$$\mathbf{K}_f = 1.51 \text{ LN}(1, 0.11)$$

From Eq. (6–77), with $K_t = 1.65$

$$\bar{q} = \frac{1.51 - 1}{1.65 - 1} = 0.785$$

$$C_q = \frac{C_{Kf}\bar{K}_f}{\bar{K}_f - 1} = \frac{0.11(1.51)}{1.51 - 1} = 0.326$$

$$\hat{\sigma}_q = C_q\bar{q} = 0.326(0.785) = 0.256$$

So,

Answer
$$\mathbf{q} = \text{LN}(0.785, 0.256)$$

EXAMPLE 6–19

The bar shown in Fig. 6–37 is machined from a cold-rolled flat having an ultimate strength of $S_{ut} = \text{LN}(87.6, 5.74)$ kpsi. The axial load shown is completely reversed. The load amplitude is $F_a = \text{LN}(1000, 120)$ lbf.

(a) Estimate the reliability.

(b) Reestimate the reliability when a rotating bending endurance test shows that $S'_e = \text{LN}(40, 2)$ kpsi.

Solution (a) From Eq. (6–70), $S'_e = 0.506\bar{S}_{ut}\text{LN}(1, 0.138) = 0.506(87.6)\text{LN}(1, 0.138)$
 $= 44.3\text{LN}(1, 0.138)$ kpsi

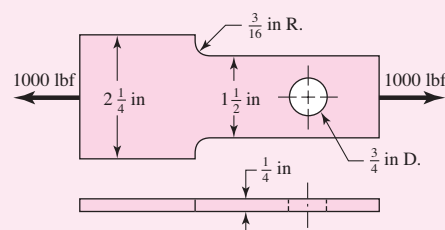
From Eq. (6–72) and Table 6–10,

$$\mathbf{k}_a = 2.67\bar{S}_{ut}^{-0.265}\text{LN}(1, 0.058) = 2.67(87.6)^{-0.265}\text{LN}(1, 0.058)$$

$$= 0.816\text{LN}(1, 0.058)$$

$$k_b = 1 \quad (\text{axial loading})$$

Figure 6–37



From Eq. (6–73),

$$\begin{aligned} \mathbf{k}_c &= 1.23 \bar{S}_{ut}^{-0.0778} \mathbf{LN}(1, 0.125) = 1.23 (87.6)^{-0.0778} \mathbf{LN}(1, 0.125) \\ &= 0.869 \mathbf{LN}(1, 0.125) \end{aligned}$$

$$\mathbf{k}_d = \mathbf{k}_f = (1, 0)$$

The endurance strength, from Eq. (6–71), is

$$\mathbf{S}_e = \mathbf{k}_a \mathbf{k}_b \mathbf{k}_c \mathbf{k}_d \mathbf{k}_f \mathbf{S}'_e$$

$$\mathbf{S}_e = 0.816 \mathbf{LN}(1, 0.058) (1) 0.869 \mathbf{LN}(1, 0.125) (1) (1) 44.3 \mathbf{LN}(1, 0.138)$$

The parameters of \mathbf{S}_e are

$$\bar{S}_e = 0.816 (0.869) 44.3 = 31.4 \text{ kpsi}$$

$$C_{S_e} = (0.058^2 + 0.125^2 + 0.138^2)^{1/2} = 0.195$$

so $\mathbf{S}_e = 31.4 \mathbf{LN}(1, 0.195)$ kpsi.

In computing the stress, the section at the hole governs. Using the terminology of Table A–15–1 we find $d/w = 0.50$, therefore $K_t \doteq 2.18$. From Table 6–15, $\sqrt{a} = 5/S_{ut} = 5/87.6 = 0.0571$ and $C_{K_f} = 0.10$. From Eqs. (6–78) and (6–79) with $r = 0.375$ in,

$$\begin{aligned} \mathbf{K}_f &= \frac{K_t}{1 + \frac{2(K_t - 1)\sqrt{a}}{K_t\sqrt{r}}} \mathbf{LN}(1, C_{K_f}) = \frac{2.18}{1 + \frac{2(2.18 - 1)0.0571}{2.18\sqrt{0.375}}} \mathbf{LN}(1, 0.10) \\ &= 1.98 \mathbf{LN}(1, 0.10) \end{aligned}$$

The stress at the hole is

$$\boldsymbol{\sigma} = \mathbf{K}_f \frac{\mathbf{F}}{A} = 1.98 \mathbf{LN}(1, 0.10) \frac{1000 \mathbf{LN}(1, 0.12)}{0.25(0.75)}$$

$$\bar{\sigma} = 1.98 \frac{1000}{0.25(0.75)} 10^{-3} = 10.56 \text{ kpsi}$$

$$C_\sigma = (0.10^2 + 0.12^2)^{1/2} = 0.156$$

so stress can be expressed as $\boldsymbol{\sigma} = 10.56 \mathbf{LN}(1, 0.156)$ kpsi.³⁴

The endurance limit is considerably greater than the load-induced stress, indicating that finite life is not a problem. For interfering lognormal-lognormal distributions, Eq. (5–43), p. 242, gives

$$z = -\frac{\ln\left(\frac{\bar{S}_e}{\bar{\sigma}} \sqrt{\frac{1 + C_\sigma^2}{1 + C_{S_e}^2}}\right)}{\sqrt{\ln[(1 + C_{S_e}^2)(1 + C_\sigma^2)]}} = -\frac{\ln\left(\frac{31.4}{10.56} \sqrt{\frac{1 + 0.156^2}{1 + 0.195^2}}\right)}{\sqrt{\ln[(1 + 0.195^2)(1 + 0.156^2)]}} = -4.37$$

From Table A–10 the probability of failure $p_f = \Phi(-4.37) = .000\,006\,35$, and the reliability is

Answer

$$R = 1 - 0.000\,006\,35 = 0.999\,993\,65$$

³⁴Note that there is a simplification here. The area is *not* a deterministic quantity. It will have a statistical distribution also. However no information was given here, and so it was treated as being deterministic.

(b) The rotary endurance tests are described by $S'_e = 40\text{LN}(1, 0.05)$ kpsi whose mean is *less* than the predicted mean in part *a*. The mean endurance strength \bar{S}_e is

$$\bar{S}_e = 0.816(0.869)40 = 28.4 \text{ kpsi}$$

$$C_{S_e} = (0.058^2 + 0.125^2 + 0.05^2)^{1/2} = 0.147$$

so the endurance strength can be expressed as $S_e = 28.3\text{LN}(1, 0.147)$ kpsi. From Eq. (5–43),

$$z = -\frac{\ln\left(\frac{28.4}{10.56}\sqrt{\frac{1+0.156^2}{1+0.147^2}}\right)}{\sqrt{\ln[(1+0.147^2)(1+0.156^2)]}} = -4.65$$

Using Table A–10, we see the probability of failure $p_f = \Phi(-4.65) = 0.000\,001\,71$, and

$$R = 1 - 0.000\,001\,71 = 0.999\,998\,29$$

an increase! The reduction in the probability of failure is $(0.000\,001\,71 - 0.000\,006\,35)/0.000\,006\,35 = -0.73$, a reduction of 73 percent. We are analyzing an existing design, so in part (a) the factor of safety was $\bar{n} = \bar{S}/\bar{\sigma} = 31.4/10.56 = 2.97$. In part (b) $\bar{n} = 28.4/10.56 = 2.69$, a *decrease*. This example gives you the opportunity to see the role of the design factor. Given knowledge of \bar{S} , C_S , $\bar{\sigma}$, C_σ , and reliability (through z), the mean factor of safety (as a design factor) separates \bar{S} and $\bar{\sigma}$ so that the reliability goal is achieved. Knowing \bar{n} alone *says nothing about the probability of failure*. Looking at $\bar{n} = 2.97$ and $\bar{n} = 2.69$ says nothing about the respective probabilities of failure. The tests did not reduce \bar{S}_e significantly, but reduced the variation C_S such that the reliability was *increased*.

When a mean design factor (or mean factor of safety) defined as $\bar{S}_e/\bar{\sigma}$ is said to be *silent* on matters of frequency of failures, it means that a scalar factor of safety by itself does not offer any information about probability of failure. Nevertheless, some engineers let the factor of safety speak up, and they can be wrong in their conclusions.

As revealing as Ex. 6–19 is concerning the meaning (and lack of meaning) of a design factor or factor of safety, let us remember that the rotary testing associated with part (b) changed *nothing* about the part, but only our knowledge about the part. The mean endurance limit was 40 kpsi all the time, and our adequacy assessment had to move with what was known.

Fluctuating Stresses

Deterministic failure curves that lie among the data are candidates for regression models. Included among these are the Gerber and ASME-elliptic for ductile materials, and, for brittle materials, Smith-Dolan models, which use mean values in their presentation. Just as the deterministic failure curves are located by endurance strength and ultimate tensile (or yield) strength, so too are stochastic failure curves located by S_e and by S_{ut} or S_y . Figure 6–32, p. 312, shows a parabolic Gerber mean curve. We also need to establish a contour located one standard deviation from the mean. Since stochastic

curves are most likely to be used with a radial load line we will use the equation given in Table 6–7, p. 299, expressed in terms of the strength means as

$$\bar{S}_a = \frac{r^2 \bar{S}_{ut}^2}{2 \bar{S}_e} \left[-1 + \sqrt{1 + \left(\frac{2 \bar{S}_e}{r \bar{S}_{ut}} \right)^2} \right] \quad (6-80)$$

Because of the positive correlation between \mathbf{S}_e and \mathbf{S}_{ut} , we increment \bar{S}_e by $C_{Se} \bar{S}_e$, \bar{S}_{ut} by $C_{Sut} \bar{S}_{ut}$, and \bar{S}_a by $C_{Sa} \bar{S}_a$, substitute into Eq. (6–80), and solve for C_{Sa} to obtain

$$C_{Sa} = \frac{(1 + C_{Sut})^2}{1 + C_{Se}} \frac{\left\{ -1 + \sqrt{1 + \left[\frac{2 \bar{S}_e (1 + C_{Se})}{r \bar{S}_{ut} (1 + C_{Sut})} \right]^2} \right\}}{\left[-1 + \sqrt{1 + \left(\frac{2 \bar{S}_e}{r \bar{S}_{ut}} \right)^2} \right]} - 1 \quad (6-81)$$

Equation (6–81) can be viewed as an interpolation formula for C_{Sa} , which falls between C_{Se} and C_{Sut} depending on load line slope r . Note that $\mathbf{S}_a = \bar{S}_a \mathbf{LN}(1, C_{Sa})$.

Similarly, the ASME-elliptic criterion of Table 6–8, p. 300, expressed in terms of its means is

$$\bar{S}_a = \frac{r \bar{S}_y \bar{S}_e}{\sqrt{r^2 \bar{S}_y^2 + \bar{S}_e^2}} \quad (6-82)$$

Similarly, we increment \bar{S}_e by $C_{Se} \bar{S}_e$, \bar{S}_y by $C_{Sy} \bar{S}_y$, and \bar{S}_a by $C_{Sa} \bar{S}_a$, substitute into Eq. (6–82), and solve for C_{Sa} :

$$C_{Sa} = (1 + C_{Sy})(1 + C_{Se}) \sqrt{\frac{r^2 \bar{S}_y^2 + \bar{S}_e^2}{r^2 \bar{S}_y^2 (1 + C_{Sy})^2 + \bar{S}_e^2 (1 + C_{Se})^2}} - 1 \quad (6-83)$$

Many *brittle* materials follow a Smith-Dolan failure criterion, written deterministically as

$$\frac{n \sigma_a}{S_e} = \frac{1 - n \sigma_m / S_{ut}}{1 + n \sigma_m / S_{ut}} \quad (6-84)$$

Expressed in terms of its means,

$$\frac{\bar{S}_a}{\bar{S}_e} = \frac{1 - \bar{S}_m / \bar{S}_{ut}}{1 + \bar{S}_m / \bar{S}_{ut}} \quad (6-85)$$

For a radial load line slope of r , we substitute \bar{S}_a / r for \bar{S}_m and solve for \bar{S}_a , obtaining

$$\bar{S}_a = \frac{r \bar{S}_{ut} + \bar{S}_e}{2} \left[-1 + \sqrt{1 + \frac{4r \bar{S}_{ut} \bar{S}_e}{(r \bar{S}_{ut} + \bar{S}_e)^2}} \right] \quad (6-86)$$

and the expression for C_{Sa} is

$$C_{Sa} = \frac{r \bar{S}_{ut} (1 + C_{Sut}) + \bar{S}_e (1 + C_{Se})}{2 \bar{S}_a} \cdot \left\{ -1 + \sqrt{1 + \frac{4r \bar{S}_{ut} \bar{S}_e (1 + C_{Se}) (1 + C_{Sut})}{[r \bar{S}_{ut} (1 + C_{Sut}) + \bar{S}_e (1 + C_{Se})]^2}} \right\} - 1 \quad (6-87)$$

EXAMPLE 6-20

A rotating shaft experiences a steady torque $\mathbf{T} = 1360\mathbf{LN}(1, 0.05)$ lbf · in, and at a shoulder with a 1.1-in small diameter, a fatigue stress-concentration factor $\mathbf{K}_f = 1.50\mathbf{LN}(1, 0.11)$, $\mathbf{K}_{fs} = 1.28\mathbf{LN}(1, 0.11)$, and at that location a bending moment of $\mathbf{M} = 1260\mathbf{LN}(1, 0.05)$ lbf · in. The material of which the shaft is machined is hot-rolled 1035 with $\mathbf{S}_{ut} = 86.2\mathbf{LN}(1, 0.045)$ kpsi and $\mathbf{S}_y = 56.0\mathbf{LN}(1, 0.077)$ kpsi. Estimate the reliability using a stochastic Gerber failure zone.

Solution Establish the endurance strength. From Eqs. (6–70) to (6–72) and Eq. (6–20), p. 280,

$$\mathbf{S}'_e = 0.506(86.2)\mathbf{LN}(1, 0.138) = 43.6\mathbf{LN}(1, 0.138) \text{ kpsi}$$

$$\mathbf{k}_a = 2.67(86.2)^{-0.265}\mathbf{LN}(1, 0.058) = 0.820\mathbf{LN}(1, 0.058)$$

$$k_b = (1.1/0.30)^{-0.107} = 0.870$$

$$\mathbf{k}_c = \mathbf{k}_d = \mathbf{k}_f = \mathbf{LN}(1, 0)$$

$$\mathbf{S}_e = 0.820\mathbf{LN}(1, 0.058)0.870(43.6)\mathbf{LN}(1, 0.138)$$

$$\bar{S}_e = 0.820(0.870)43.6 = 31.1 \text{ kpsi}$$

$$C_{Se} = (0.058^2 + 0.138^2)^{1/2} = 0.150$$

and so $\mathbf{S}_e = 31.1\mathbf{LN}(1, 0.150)$ kpsi.

Stress (in kpsi):

$$\sigma_a = \frac{32\mathbf{K}_f\mathbf{M}_a}{\pi d^3} = \frac{32(1.50)\mathbf{LN}(1, 0.11)1.26\mathbf{LN}(1, 0.05)}{\pi(1.1)^3}$$

$$\bar{\sigma}_a = \frac{32(1.50)1.26}{\pi(1.1)^3} = 14.5 \text{ kpsi}$$

$$C_{\sigma a} = (0.11^2 + 0.05^2)^{1/2} = 0.121$$

$$\tau_m = \frac{16\mathbf{K}_{fs}\mathbf{T}_m}{\pi d^3} = \frac{16(1.28)\mathbf{LN}(1, 0.11)1.36\mathbf{LN}(1, 0.05)}{\pi(1.1)^3}$$

$$\bar{\tau}_m = \frac{16(1.28)1.36}{\pi(1.1)^3} = 6.66 \text{ kpsi}$$

$$C_{\tau m} = (0.11^2 + 0.05^2)^{1/2} = 0.121$$

$$\bar{\sigma}'_a = (\bar{\sigma}_a^2 + 3\bar{\tau}_m^2)^{1/2} = [14.5^2 + 3(0)^2]^{1/2} = 14.5 \text{ kpsi}$$

$$\bar{\sigma}'_m = (\bar{\sigma}_m^2 + 3\bar{\tau}_m^2)^{1/2} = [0 + 3(6.66)^2]^{1/2} = 11.54 \text{ kpsi}$$

$$r = \frac{\bar{\sigma}'_a}{\bar{\sigma}'_m} = \frac{14.5}{11.54} = 1.26$$

Strength: From Eqs. (6–80) and (6–81),

$$\bar{S}_a = \frac{1.26^2 86.2^2}{2(31.1)} \left\{ -1 + \sqrt{1 + \left[\frac{2(31.1)}{1.26(86.2)} \right]^2} \right\} = 28.9 \text{ kpsi}$$

$$C_{S_a} = \frac{(1 + 0.045)^2}{1 + 0.150} \frac{-1 + \sqrt{1 + \left[\frac{2(31.1)(1 + 0.15)}{1.26(86.2)(1 + 0.045)} \right]^2}}{-1 + \sqrt{1 + \left[\frac{2(31.1)}{1.26(86.2)} \right]^2}} - 1 = 0.134$$

Reliability: Since $S_a = 28.9\text{LN}(1, 0.134)$ kpsi and $\sigma'_a = 14.5\text{LN}(1, 0.121)$ kpsi, Eq. (5–44), p. 242, gives

$$z = -\frac{\ln\left(\frac{\bar{S}_a}{\bar{\sigma}_a} \sqrt{\frac{1 + C_{\sigma_a}^2}{1 + C_{S_a}^2}}\right)}{\sqrt{\ln[(1 + C_{S_a}^2)(1 + C_{\sigma_a}^2)]}} = -\frac{\ln\left(\frac{28.9}{14.5} \sqrt{\frac{1 + 0.121^2}{1 + 0.134^2}}\right)}{\sqrt{\ln[(1 + 0.134^2)(1 + 0.121^2)]}} = -3.83$$

From Table A–10 the probability of failure is $p_f = 0.000\,065$, and the reliability is, against fatigue,

Answer

$$R = 1 - p_f = 1 - 0.000\,065 = 0.999\,935$$

The chance of first-cycle yielding is estimated by interfering S_y with σ'_{\max} . The quantity σ'_{\max} is formed from $\sigma'_a + \sigma'_m$. The mean of σ'_{\max} is $\bar{\sigma}'_a + \bar{\sigma}'_m = 14.5 + 11.54 = 26.04$ kpsi. The coefficient of variation of the sum is 0.121, since both COVs are 0.121, thus $C_{\sigma_{\max}} = 0.121$. We interfere $S_y = 56\text{LN}(1, 0.077)$ kpsi with $\sigma'_{\max} = 26.04\text{LN}(1, 0.121)$ kpsi. The corresponding z variable is

$$z = -\frac{\ln\left(\frac{56}{26.04} \sqrt{\frac{1 + 0.121^2}{1 + 0.077^2}}\right)}{\sqrt{\ln[(1 + 0.077^2)(1 + 0.121^2)]}} = -5.39$$

which represents, from Table A–10, a probability of failure of approximately 0.07358 [which represents $3.58(10^{-8})$] of first-cycle yield in the fillet.

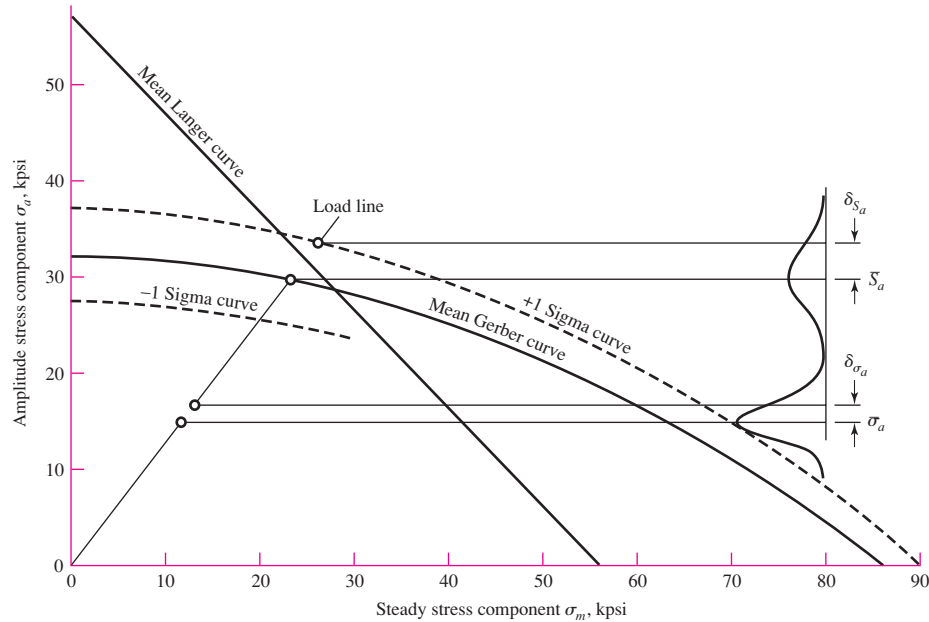
The probability of observing a fatigue failure exceeds the probability of a yield failure, something a deterministic analysis does not foresee and in fact could lead one to expect a yield failure should a failure occur. Look at the $\sigma'_a S_a$ interference and the $\sigma'_{\max} S_y$ interference and examine the z expressions. These control the relative probabilities. A deterministic analysis is oblivious to this and can mislead. Check your statistics text for events that are not mutually exclusive, but are independent, to quantify the probability of failure:

$$\begin{aligned} p_f &= p(\text{yield}) + p(\text{fatigue}) - p(\text{yield and fatigue}) \\ &= p(\text{yield}) + p(\text{fatigue}) - p(\text{yield})p(\text{fatigue}) \\ &= 0.358(10^{-7}) + 0.65(10^{-4}) - 0.358(10^{-7})0.65(10^{-4}) = 0.650(10^{-4}) \\ R &= 1 - 0.650(10^{-4}) = 0.999\,935 \end{aligned}$$

against either or both modes of failure.

Figure 6–38

Designer’s fatigue diagram
for Ex. 6–20.



Examine Fig. 6–38, which depicts the results of Ex. 6–20. The problem distribution of S_e was compounded of historical experience with S'_e and the uncertainty manifestations due to features requiring Marin considerations. The Gerber “failure zone” displays this. The interference with load-induced stress predicts the risk of failure. If additional information is known (R. R. Moore testing, with or without Marin features), the stochastic Gerber can accommodate to the information. Usually, the accommodation to additional test information is movement and contraction of the failure zone. In its own way the stochastic failure model accomplishes more precisely what the deterministic models and conservative postures intend. Additionally, stochastic models can estimate the probability of failure, something a deterministic approach cannot address.

The Design Factor in Fatigue

The designer, in envisioning how to execute the geometry of a part subject to the imposed constraints, can begin making a priori decisions without realizing the impact on the design task. Now is the time to note how these things are related to the reliability goal.

The mean value of the design factor is given by Eq. (5–45), repeated here as

$$\bar{n} = \exp \left[-z \sqrt{\ln(1 + C_n^2)} + \ln \sqrt{1 + C_n^2} \right] \doteq \exp[C_n(-z + C_n/2)] \quad (6-88)$$

in which, from Table 20–6 for the quotient $\mathbf{n} = \mathbf{S}/\boldsymbol{\sigma}$,

$$C_n = \sqrt{\frac{C_S^2 + C_\sigma^2}{1 + C_\sigma^2}}$$

where C_S is the COV of the significant strength and C_σ is the COV of the significant stress at the critical location. Note that \bar{n} is a function of the reliability goal (through z) and the COVs of the strength and stress. There are no means present, just measures of variability. The nature of C_S in a fatigue situation may be C_{Se} for fully reversed loading, or C_{Sa} otherwise. Also, experience shows $C_{Se} > C_{Sa} > C_{Sut}$, so C_{Se} can be used as a conservative estimate of C_{Sa} . If the loading is bending or axial, the form of

σ'_a might be

$$\sigma'_a = K_f \frac{M_a c}{I} \quad \text{or} \quad \sigma'_a = K_f \frac{F}{A}$$

respectively. This makes the COV of σ'_a , namely $C_{\sigma'_a}$, expressible as

$$C_{\sigma'_a} = (C_{K_f}^2 + C_F^2)^{1/2}$$

again a function of variabilities. The COV of S_e , namely C_{S_e} , is

$$C_{S_e} = (C_{k_a}^2 + C_{k_c}^2 + C_{k_d}^2 + C_{k_f}^2 + C_{S_e'}^2)^{1/2}$$

again, a function of variabilities. An example will be useful.

EXAMPLE 6–21

A strap to be made from a cold-drawn steel strip workpiece is to carry a fully reversed axial load $F = \text{LN}(1000, 120)$ lbf as shown in Fig. 6–39. Consideration of adjacent parts established the geometry as shown in the figure, except for the thickness t . Make a decision as to the magnitude of the design factor if the reliability goal is to be 0.999 95, then make a decision as to the workpiece thickness t .

Solution

Let us take each a priori decision and note the consequence:

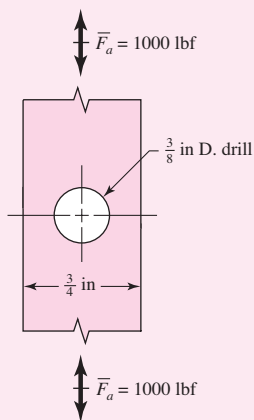


Figure 6–39

A strap with a thickness t is subjected to a fully reversed axial load of 1000 lbf. Example 6–21 considers the thickness necessary to attain a reliability of 0.999 95 against a fatigue failure.

A Priori Decision

Consequence

Use 1018 CD steel $\bar{S}_{ut} = 87.6$ kpsi, $C_{S_{ut}} = 0.0655$

Function:

Carry axial load $C_F = 0.12$, $C_{k_c} = 0.125$

$R \geq 0.999\ 95$ $z = -3.891$

Machined surfaces $C_{k_a} = 0.058$

Hole critical $C_{K_f} = 0.10$, $C_{\sigma'_a} = (0.10^2 + 0.12^2)^{1/2} = 0.156$

Ambient temperature $C_{k_d} = 0$

Correlation method $C_{S_e} = 0.138$

Hole drilled $C_{S_e} = (0.058^2 + 0.125^2 + 0.138^2)^{1/2} = 0.195$

$$C_n = \sqrt{\frac{C_{S_e}^2 + C_{\sigma'_a}^2}{1 + C_{\sigma'_a}^2}} = \sqrt{\frac{0.195^2 + 0.156^2}{1 + 0.156^2}} = 0.2467$$

$$\bar{n} = \exp \left[-(-3.891) \sqrt{\ln(1 + 0.2467^2)} + \ln \sqrt{1 + 0.2467^2} \right] = 2.65$$

These eight a priori decisions have quantified the mean design factor as $\bar{n} = 2.65$. Proceeding deterministically hereafter we write

$$\sigma'_a = \frac{\bar{S}_e}{\bar{n}} = \bar{K}_f \frac{\bar{F}}{(w-d)t}$$

from which

$$t = \frac{\bar{K}_f \bar{n} \bar{F}}{(w-d)\bar{S}_e} \quad (1)$$

To evaluate the preceding equation we need \bar{S}_e and \bar{K}_f . The Marin factors are

$$k_a = 2.67\bar{S}_{ut}^{-0.265} \text{LN}(1, 0.058) = 2.67(87.6)^{-0.265} \text{LN}(1, 0.058)$$

$$\bar{k}_a = 0.816$$

$$k_b = 1$$

$$k_c = 1.23\bar{S}_{ut}^{-0.078} \text{LN}(1, 0.125) = 0.868 \text{LN}(1, 0.125)$$

$$\bar{k}_c = 0.868$$

$$\bar{k}_d = \bar{k}_f = 1$$

and the endurance strength is

$$\bar{S}_e = 0.816(1)(0.868)(1)(1)0.506(87.6) = 31.4 \text{ kpsi}$$

The hole governs. From Table A–15–1 we find $d/w = 0.50$, therefore $K_t = 2.18$. From Table 6–15 $\sqrt{a} = 5/\bar{S}_{ut} = 5/87.6 = 0.0571$, $r = 0.1875$ in. From Eq. (6–78) the fatigue stress concentration factor is

$$\bar{K}_f = \frac{2.18}{1 + \frac{2(2.18 - 1)}{2.18} \frac{0.0571}{\sqrt{0.1875}}} = 1.91$$

The thickness t can now be determined from Eq. (1)

$$t \geq \frac{\bar{K}_f \bar{n} \bar{F}}{(w - d)S_e} = \frac{1.91(2.65)1000}{(0.75 - 0.375)31\,400} = 0.430 \text{ in}$$

Use $\frac{1}{2}$ -in-thick strap for the workpiece. The $\frac{1}{2}$ -in thickness attains and, in the rounding to available nominal size, exceeds the reliability goal.

The example demonstrates that, for a given reliability goal, the fatigue design factor that facilitates its attainment is decided by the variabilities of the situation. Furthermore, the necessary design factor is not a constant independent of the way the concept unfolds. Rather, it is a function of a number of seemingly unrelated a priori decisions that are made in giving definition to the concept. The involvement of stochastic methodology can be limited to defining the necessary design factor. In particular, in the example, the design factor is not a function of the design variable t ; rather, t follows from the design factor.

6–18 Road Maps and Important Design Equations for the Stress-Life Method

As stated in Sec. 6–15, there are three categories of fatigue problems. The important procedures and equations for deterministic stress-life problems are presented here.

Completely Reversing Simple Loading

- 1 Determine S'_e either from test data or

$$p. 274 \quad S'_e = \begin{cases} 0.5S_{ut} & S_{ut} \leq 200 \text{ kpsi (1400 MPa)} \\ 100 \text{ kpsi} & S_{ut} > 200 \text{ kpsi} \\ 700 \text{ MPa} & S_{ut} > 1400 \text{ MPa} \end{cases} \quad (6-8)$$

2 Modify S'_e to determine S_e .

$$\text{p. 279} \quad S_e = k_a k_b k_c k_d k_e k_f S'_e \quad (6-18)$$

$$k_a = a S_{ut}^b \quad (6-19)$$

Table 6-2

Parameters for Marin
Surface Modification
Factor, Eq. (6-19)

Surface Finish	Factor a		Exponent b
	S_{ut} , kpsi	S_{ut} , MPa	
Ground	1.34	1.58	-0.085
Machined or cold-drawn	2.70	4.51	-0.265
Hot-rolled	14.4	57.7	-0.718
As-forged	39.9	272.	-0.995

Rotating shaft. For bending or torsion,

$$\text{p. 280} \quad k_b = \begin{cases} (d/0.3)^{-0.107} = 0.879d^{-0.107} & 0.11 \leq d \leq 2 \text{ in} \\ 0.91d^{-0.157} & 2 < d \leq 10 \text{ in} \\ (d/7.62)^{-0.107} = 1.24d^{-0.107} & 2.79 \leq d \leq 51 \text{ mm} \\ 1.51d^{-0.157} & 51 < 254 \text{ mm} \end{cases} \quad (6-20)$$

For axial,

$$k_b = 1 \quad (6-21)$$

Nonrotating member. Use Table 6-3, p. 282, for d_e and substitute into Eq. (6-20) for d .

$$\text{p. 282} \quad k_c = \begin{cases} 1 & \text{bending} \\ 0.85 & \text{axial} \\ 0.59 & \text{torsion} \end{cases} \quad (6-26)$$

p. 283 Use Table 6-4 for k_d , or

$$\begin{aligned} k_d = & 0.975 + 0.432(10^{-3})T_F - 0.115(10^{-5})T_F^2 \\ & + 0.104(10^{-8})T_F^3 - 0.595(10^{-12})T_F^4 \end{aligned} \quad (6-27)$$

pp. 284–285, k_e

Table 6-5

Reliability Factors k_e
Corresponding to
8 Percent Standard
Deviation of the
Endurance Limit

Reliability, %	Transformation Variate z_a	Reliability Factor k_e
50	0	1.000
90	1.288	0.897
95	1.645	0.868
99	2.326	0.814
99.9	3.091	0.753
99.99	3.719	0.702
99.999	4.265	0.659
99.9999	4.753	0.620

pp. 285–286, k_f

- 3 Determine fatigue stress-concentration factor, K_f or K_{fs} . First, find K_t or K_{ts} from Table A–15.

$$\text{p. 287} \quad K_f = 1 + q(K_t - 1) \quad \text{or} \quad K_{fs} = 1 + q(K_{ts} - 1) \quad (6-32)$$

Obtain q from either Fig. 6–20 or 6–21, pp. 287–288.

Alternatively, for reversed bending or axial loads,

$$\text{p. 288} \quad K_f = 1 + \frac{K_t - 1}{1 + \sqrt{a/r}} \quad (6-33)$$

For S_{ut} in kpsi,

$$\begin{aligned} \sqrt{a} &= 0.245\,799 - 0.307\,794(10^{-2})S_{ut} \\ &+ 0.150\,874(10^{-4})S_{ut}^2 - 0.266\,978(10^{-7})S_{ut}^3 \end{aligned} \quad (6-35)$$

For torsion for low-alloy steels, increase S_{ut} by 20 kpsi and apply to Eq. (6–35).

- 4 Apply K_f or K_{fs} by *either* dividing S_e by it *or* multiplying it with the purely reversing stress *not* both.
- 5 Determine fatigue life constants a and b . If $S_{ut} \geq 70$ kpsi, determine f from Fig. 6–18, p. 277. If $S_{ut} < 70$ kpsi, let $f = 0.9$.

$$\text{p. 277} \quad a = (f S_{ut})^2 / S_e \quad (6-14)$$

$$b = -[\log(f S_{ut}/S_e)]/3 \quad (6-15)$$

- 6 Determine fatigue strength S_f at N cycles, or, N cycles to failure at a reversing stress σ_a

(*Note:* this only applies to purely reversing stresses where $\sigma_m = 0$).

$$\text{p. 277} \quad S_f = aN^b \quad (6-13)$$

$$N = (\sigma_a/a)^{1/b} \quad (6-16)$$

Fluctuating Simple Loading

For S_e , K_f or K_{fs} , see previous subsection.

- 1 Calculate σ_m and σ_a . Apply K_f to both stresses.

$$\text{p. 293} \quad \sigma_m = (\sigma_{\max} + \sigma_{\min})/2 \quad \sigma_a = |\sigma_{\max} - \sigma_{\min}|/2 \quad (6-36)$$

- 2 Apply to a fatigue failure criterion, p. 298

$$\sigma_m \geq 0$$

$$\text{Soderburg} \quad \sigma_a/S_e + \sigma_m/S_y = 1/n \quad (6-45)$$

$$\text{mod-Goodman} \quad \sigma_a/S_e + \sigma_m/S_{ut} = 1/n \quad (6-46)$$

$$\text{Gerber} \quad n\sigma_a/S_e + (n\sigma_m/S_{ut})^2 = 1 \quad (6-47)$$

$$\text{ASME-elliptic} \quad (\sigma_a/S_e)^2 + (\sigma_m/S_{ut})^2 = 1/n^2 \quad (6-48)$$

$$\sigma_m < 0$$

$$\text{p. 297} \quad \sigma_a = S_e/n$$

Torsion. Use the same equations as apply for $\sigma_m \geq 0$, except replace σ_m and σ_a with τ_m and τ_a , use $k_c = 0.59$ for S_e , replace S_{ut} with $S_{su} = 0.67S_{ut}$ [Eq. (6–54), p. 309], and replace S_y with $S_{sy} = 0.577S_y$ [Eq. (5–21), p. 217]

3 Check for localized yielding.

p. 298
$$\sigma_a + \sigma_m = S_y/n \quad (6-49)$$

or, for torsion,
$$\tau_a + \tau_m = 0.577S_y/n$$

4 For finite-life fatigue strength (see Ex. 6–12, pp. 305–306),

$$\text{mod-Goodman} \quad S_f = \frac{\sigma_a}{1 - (\sigma_m/S_{ut})}$$

$$\text{Gerber} \quad S_f = \frac{\sigma_a}{1 - (\sigma_m/S_{ut})^2}$$

If determining the finite life N with a factor of safety n , substitute S_f/n for σ_a in Eq. (6–16). That is,

$$N = \left(\frac{S_f/n}{a} \right)^{1/b}$$

Combination of Loading Modes

See previous subsections for earlier definitions.

1 Calculate von Mises stresses for alternating and midrange stress states, σ'_a and σ'_m . When determining S_e , do not use k_c nor divide by K_f or K_{fs} . Apply K_f and/or K_{fs} directly to each specific alternating and midrange stress. If axial stress is present divide the alternating axial stress by $k_c = 0.85$. For the special case of combined bending, torsional shear, and axial stresses

p. 310

$$\sigma'_a = \left\{ \left[(K_f)_{bending}(\sigma_a)_{bending} + (K_f)_{axial} \frac{(\sigma_a)_{axial}}{0.85} \right]^2 + 3 \left[(K_{fs})_{torsion}(\tau_a)_{torsion} \right]^2 \right\}^{1/2} \quad (6-55)$$

$$\sigma'_m = \left\{ \left[(K_f)_{bending}(\sigma_m)_{bending} + (K_f)_{axial}(\sigma_m)_{axial} \right]^2 + 3 \left[(K_{fs})_{torsion}(\tau_m)_{torsion} \right]^2 \right\}^{1/2} \quad (6-56)$$

2 Apply stresses to fatigue criterion [see Eq. (6–45) to (6–48), p. 338 in previous subsection].

3 Conservative check for localized yielding using von Mises stresses.

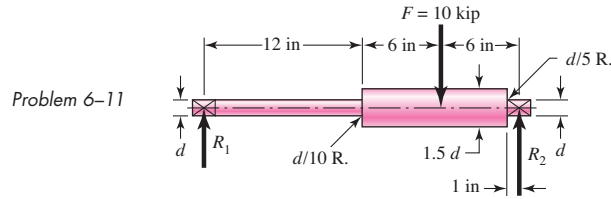
p. 298
$$\sigma'_a + \sigma'_m = S_y/n \quad (6-49)$$

PROBLEMS

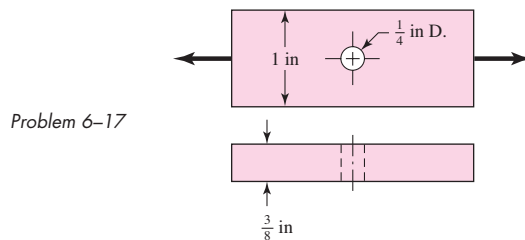
Problems 6–1 to 6–31 are to be solved by deterministic methods. Problems 6–32 to 6–38 are to be solved by stochastic methods. Problems 6–39 to 6–46 are computer problems.

Deterministic Problems

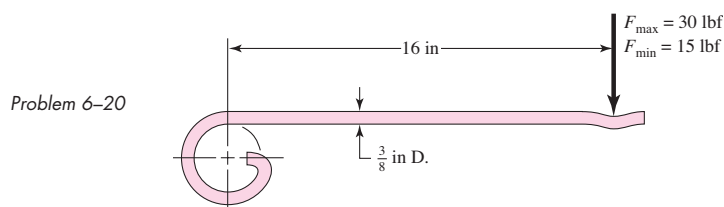
- 6–1** A $\frac{1}{4}$ -in drill rod was heat-treated and ground. The measured hardness was found to be 490 Brinell. Estimate the endurance strength if the rod is used in rotating bending.
- 6–2** Estimate S'_e for the following materials:
(a) AISI 1020 CD steel.
(b) AISI 1080 HR steel.
(c) 2024 T3 aluminum.
(d) AISI 4340 steel heat-treated to a tensile strength of 250 kpsi.
- 6–3** Estimate the fatigue strength of a rotating-beam specimen made of AISI 1020 hot-rolled steel corresponding to a life of 12.5 kilocycles of stress reversal. Also, estimate the life of the specimen corresponding to a stress amplitude of 36 kpsi. The known properties are $S_{ut} = 66.2$ kpsi, $\sigma_0 = 115$ kpsi, $m = 0.22$, and $\epsilon_f = 0.90$.
- 6–4** Derive Eq. (6–17). For the specimen of Prob. 6–3, estimate the strength corresponding to 500 cycles.
- 6–5** For the interval $10^3 \leq N \leq 10^6$ cycles, develop an expression for the axial fatigue strength $(S'_f)_{ax}$ for the polished specimens of 4130 used to obtain Fig. 6–10. The ultimate strength is $S_{ut} = 125$ kpsi and the endurance limit is $(S'_e)_{ax} = 50$ kpsi.
- 6–6** Estimate the endurance strength of a 32-mm-diameter rod of AISI 1035 steel having a machined finish and heat-treated to a tensile strength of 710 MPa.
- 6–7** Two steels are being considered for manufacture of as-forged connecting rods. One is AISI 4340 Cr-Mo-Ni steel capable of being heat-treated to a tensile strength of 260 kpsi. The other is a plain carbon steel AISI 1040 with an attainable S_{ut} of 113 kpsi. If each rod is to have a size giving an equivalent diameter d_e of 0.75 in, is there any advantage to using the alloy steel for this fatigue application?
- 6–8** A solid round bar, 25 mm in diameter, has a groove 2.5-mm deep with a 2.5-mm radius machined into it. The bar is made of AISI 1018 CD steel and is subjected to a purely reversing torque of 200 N · m. For the S - N curve of this material, let $f = 0.9$.
(a) Estimate the number of cycles to failure.
(b) If the bar is also placed in an environment with a temperature of 450°C, estimate the number of cycles to failure.
- 6–9** A solid square rod is cantilevered at one end. The rod is 0.8 m long and supports a completely reversing transverse load at the other end of ± 1 kN. The material is AISI 1045 hot-rolled steel. If the rod must support this load for 10^4 cycles with a factor of safety of 1.5, what dimension should the square cross section have? Neglect any stress concentrations at the support end and assume that $f = 0.9$.
- 6–10** A rectangular bar is cut from an AISI 1018 cold-drawn steel flat. The bar is 60 mm wide by 10 mm thick and has a 12-mm hole drilled through the center as depicted in Table A–15–1. The bar is concentrically loaded in push-pull fatigue by axial forces F_a , uniformly distributed across the width. Using a design factor of $n_d = 1.8$, estimate the largest force F_a that can be applied ignoring column action.
- 6–11** Bearing reactions R_1 and R_2 are exerted on the shaft shown in the figure, which rotates at 1150 rev/min and supports a 10-kip bending force. Use a 1095 HR steel. Specify a diameter d using a design factor of $n_d = 1.6$ for a life of 3 min. The surfaces are machined.



- 6-12** A bar of steel has the minimum properties $S_e = 276$ MPa, $S_y = 413$ MPa, and $S_{ut} = 551$ MPa. The bar is subjected to a steady torsional stress of 103 MPa and an alternating bending stress of 172 MPa. Find the factor of safety guarding against a static failure, and either the factor of safety guarding against a fatigue failure or the expected life of the part. For the fatigue analysis use:
- Modified Goodman criterion.
 - Gerber criterion.
 - ASME-elliptic criterion.
- 6-13** Repeat Prob. 6-12 but with a steady torsional stress of 138 MPa and an alternating bending stress of 69 MPa.
- 6-14** Repeat Prob. 6-12 but with a steady torsional stress of 103 MPa, an alternating torsional stress of 69 MPa, and an alternating bending stress of 83 MPa.
- 6-15** Repeat Prob. 6-12 but with an alternating torsional stress of 207 MPa.
- 6-16** Repeat Prob. 6-12 but with an alternating torsional stress of 103 MPa and a steady bending stress of 103 MPa.
- 6-17** The cold-drawn AISI 1018 steel bar shown in the figure is subjected to an axial load fluctuating between 800 and 3000 lbf. Estimate the factors of safety n_y and n_f using (a) a Gerber fatigue failure criterion as part of the designer's fatigue diagram, and (b) an ASME-elliptic fatigue failure criterion as part of the designer's fatigue diagram.



- 6-18** Repeat Prob. 6-17, with the load fluctuating between -800 and 3000 lbf. Assume no buckling.
- 6-19** Repeat Prob. 6-17, with the load fluctuating between 800 and -3000 lbf. Assume no buckling.
- 6-20** The figure shows a formed round-wire cantilever spring subjected to a varying force. The hardness tests made on 25 springs gave a minimum hardness of 380 Brinell. It is apparent from the mounting details that there is no stress concentration. A visual inspection of the springs indicates



that the surface finish corresponds closely to a hot-rolled finish. What number of applications is likely to cause failure? Solve using:

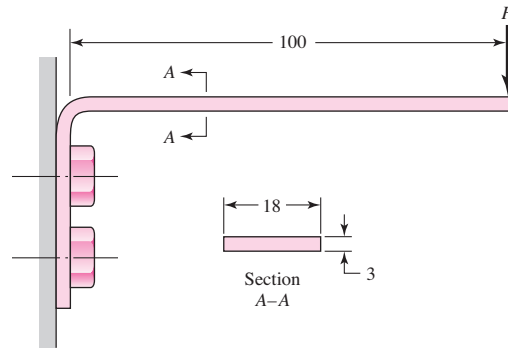
- (a) Modified Goodman criterion.
- (b) Gerber criterion.

6-21

The figure is a drawing of a 3- by 18-mm latching spring. A preload is obtained during assembly by shimming under the bolts to obtain an estimated initial deflection of 2 mm. The latching operation itself requires an additional deflection of exactly 4 mm. The material is ground high-carbon steel, bent then hardened and tempered to a minimum hardness of 490 Bhn. The radius of the bend is 3 mm. Estimate the yield strength to be 90 percent of the ultimate strength.

- (a) Find the maximum and minimum latching forces.
- (b) Is it likely the spring will fail in fatigue? Use the Gerber criterion.

Problem 6-21
Dimensions in millimeters



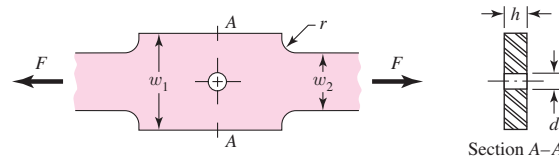
6-22

Repeat Prob. 6-21, part *b*, using the modified Goodman criterion.

6-23

The figure shows the free-body diagram of a connecting-link portion having stress concentration at three sections. The dimensions are $r = 0.25$ in, $d = 0.75$ in, $h = 0.50$ in, $w_1 = 3.75$ in, and $w_2 = 2.5$ in. The forces F fluctuate between a tension of 4 kip and a compression of 16 kip. Neglect column action and find the least factor of safety if the material is cold-drawn AISI 1018 steel.

Problem 6-23

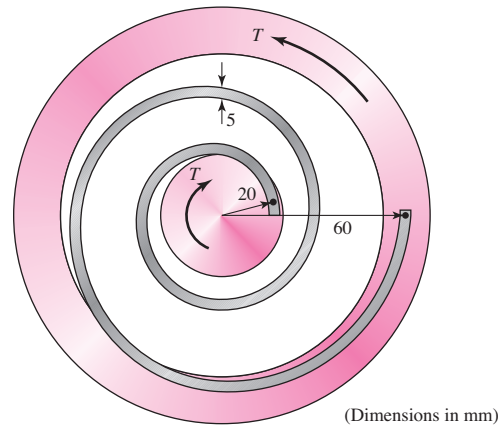


6-24

The torsional coupling in the figure is composed of a curved beam of square cross section that is welded to an input shaft and output plate. A torque is applied to the shaft and cycles from zero to T . The cross section of the beam has dimensions of 5 by 5 mm, and the centroidal axis of the beam describes a curve of the form $r = 20 + 10 \theta / \pi$, where r and θ are in mm and radians, respectively ($0 \leq \theta \leq 4\pi$). The curved beam has a machined surface with yield and ultimate strength values of 420 and 770 MPa, respectively.

- (a) Determine the maximum allowable value of T such that the coupling will have an infinite life with a factor of safety, $n = 3$, using the modified Goodman criterion.
- (b) Repeat part (a) using the Gerber criterion.
- (c) Using T found in part (b), determine the factor of safety guarding against yield.

Problem 6–24

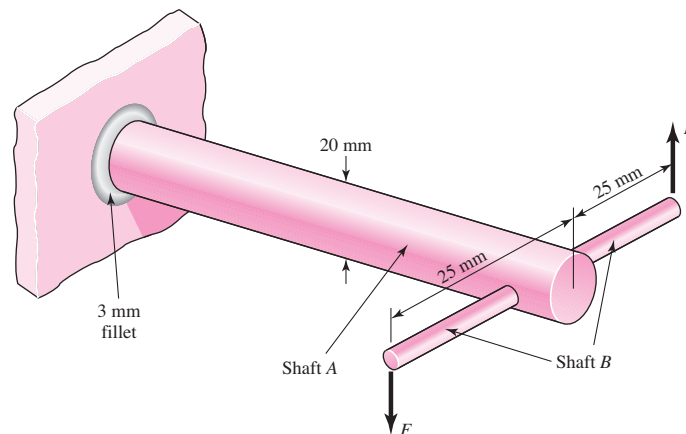


6–25 Repeat Prob. 6–24 ignoring curvature effects on the bending stress.

6–26 In the figure shown, shaft A, made of AISI 1010 hot-rolled steel, is welded to a fixed support and is subjected to loading by equal and opposite forces F via shaft B. A theoretical stress concentration K_{ts} of 1.6 is induced by the 3-mm fillet. The length of shaft A from the fixed support to the connection at shaft B is 1 m. The load F cycles from 0.5 to 2 kN.

- (a) For shaft A, find the factor of safety for infinite life using the modified Goodman fatigue failure criterion.
 (b) Repeat part (a) using the Gerber fatigue failure criterion.

Problem 6–26



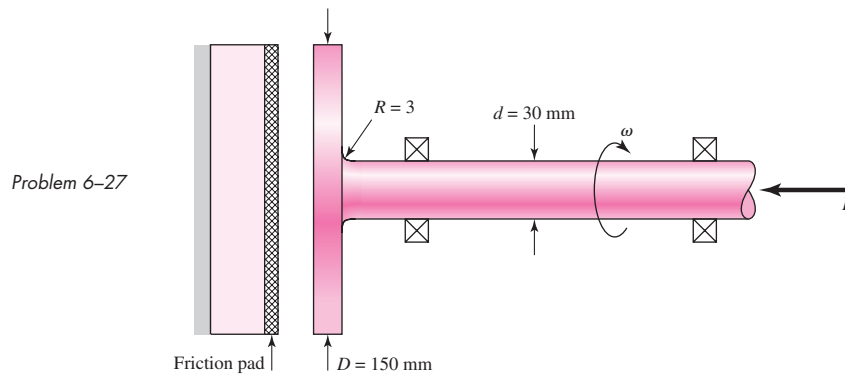
6–27 A schematic of a clutch-testing machine is shown. The steel shaft rotates at a constant speed ω . An axial load is applied to the shaft and is cycled from zero to P . The torque T induced by the clutch face onto the shaft is given by

$$T = \frac{fP(D+d)}{4}$$

where D and d are defined in the figure and f is the coefficient of friction of the clutch face. The shaft is machined with $S_y = 800$ MPa and $S_{ut} = 1000$ MPa. The theoretical stress concentration factors for the fillet are 3.0 and 1.8 for the axial and torsional loading, respectively.

- (a) Assume the load variation P is synchronous with shaft rotation. With $f = 0.3$, find the maximum allowable load P such that the shaft will survive a minimum of 10^6 cycles with a factor of safety of 3. Use the modified Goodman criterion. Determine the corresponding factor of safety guarding against yielding.

- (b) Suppose the shaft is not rotating, but the load P is cycled as shown. With $f = 0.3$, find the maximum allowable load P so that the shaft will survive a minimum of 10^6 cycles with a factor of safety of 3. Use the modified Goodman criterion. Determine the corresponding factor of safety guarding against yielding.



- 6–28** For the clutch of Prob. 6–27, the external load P is cycled between 20 kN and 80 kN. Assuming that the shaft is rotating synchronous with the external load cycle, estimate the number of cycles to failure. Use the modified Goodman fatigue failure criteria.
- 6–29** A flat leaf spring has fluctuating stress of $\sigma_{\max} = 420$ MPa and $\sigma_{\min} = 140$ MPa applied for $5(10^4)$ cycles. If the load changes to $\sigma_{\max} = 350$ MPa and $\sigma_{\min} = -200$ MPa, how many cycles should the spring survive? The material is AISI 1040 CD and has a fully corrected endurance strength of $S_e = 200$ MPa. Assume that $f = 0.9$.
- (a) Use Miner's method.
 (b) Use Manson's method.
- 6–30** A machine part will be cycled at ± 48 kpsi for $4(10^3)$ cycles. Then the loading will be changed to ± 38 kpsi for $6(10^4)$ cycles. Finally, the load will be changed to ± 32 kpsi. How many cycles of operation can be expected at this stress level? For the part, $S_{ut} = 76$ kpsi, $f = 0.9$, and has a fully corrected endurance strength of $S_e = 30$ kpsi.
- (a) Use Miner's method.
 (b) Use Manson's method.
- 6–31** A rotating-beam specimen with an endurance limit of 50 kpsi and an ultimate strength of 100 kpsi is cycled 20 percent of the time at 70 kpsi, 50 percent at 55 kpsi, and 30 percent at 40 kpsi. Let $f = 0.9$ and estimate the number of cycles to failure.

Stochastic Problems

- 6–32** Solve Prob. 6–1 if the ultimate strength of production pieces is found to be $S_{ut} = 245LN(1, 0.0508)$ kpsi.
- 6–33** The situation is similar to that of Prob. 6–10 wherein the imposed completely reversed axial load $F_a = 15LN(1, 0.20)$ kN is to be carried by the link with a thickness to be specified by you, the designer. Use the 1018 cold-drawn steel of Prob. 6–10 with $S_{ut} = 440LN(1, 0.30)$ MPa and $S_{yt} = 370LN(1, 0.061)$. The reliability goal must exceed 0.999. Using the correlation method, specify the thickness t .
- 6–34** A solid round steel bar is machined to a diameter of 1.25 in. A groove $\frac{1}{8}$ in deep with a radius of $\frac{1}{8}$ in is cut into the bar. The material has a mean tensile strength of 110 kpsi. A completely reversed bending moment $M = 1400$ lbf · in is applied. Estimate the reliability. The size factor should be based on the gross diameter. The bar rotates.

- 6–35** Repeat Prob. 6–34, with a completely reversed torsional moment of $T = 1400 \text{ lbf} \cdot \text{in}$ applied.
- 6–36** A $1\frac{1}{4}$ -in-diameter hot-rolled steel bar has a $\frac{1}{8}$ -in diameter hole drilled transversely through it. The bar is nonrotating and is subject to a completely reversed bending moment of $M = 1600 \text{ lbf} \cdot \text{in}$ in the same plane as the axis of the transverse hole. The material has a mean tensile strength of 58 kpsi. Estimate the reliability. The size factor should be based on the gross size. Use Table A–16 for K_f .
- 6–37** Repeat Prob. 6–36, with the bar subject to a completely reversed torsional moment of $2400 \text{ lbf} \cdot \text{in}$.
- 6–38** The plan view of a link is the same as in Prob. 6–23; however, the forces F are completely reversed, the reliability goal is 0.998, and the material properties are $S_{ut} = 64\text{LN}(1, 0.045)$ kpsi and $S_y = 54\text{LN}(1, 0.077)$ kpsi. Treat F_a as deterministic, and specify the thickness h .


Computer Problems

- 6–39** A $\frac{1}{4}$ by $1\frac{1}{2}$ -in steel bar has a $\frac{3}{4}$ -in drilled hole located in the center, much as is shown in Table A–15–1. The bar is subjected to a completely reversed axial load with a deterministic load of 1200 lbf. The material has a mean ultimate tensile strength of $\bar{S}_{ut} = 80$ kpsi.
- (a) Estimate the reliability.
- (b) Conduct a computer simulation to confirm your answer to part a.
- 6–40** From your experience with Prob. 6–39 and Ex. 6–19, you observed that for completely reversed axial and bending fatigue, it is possible to
- Observe the COVs associated with a priori design considerations.
 - Note the reliability goal.
 - Find the mean design factor \bar{n}_d which will permit making a geometric design decision that will attain the goal using deterministic methods in conjunction with \bar{n}_d .
- Formulate an interactive computer program that will enable the user to find \bar{n}_d . While the material properties S_{ut} , S_y , and the load COV must be input by the user, all of the COVs associated with $\Phi_{0.30}$, k_a , k_c , k_d , and K_f can be internal, and answers to questions will allow C_σ and C_S , as well as C_n and \bar{n}_d , to be calculated. Later you can add improvements. Test your program with problems you have already solved.
- 6–41** When using the Gerber fatigue failure criterion in a stochastic problem, Eqs. (6–80) and (6–81) are useful. They are also computationally complicated. It is helpful to have a computer subroutine or procedure that performs these calculations. When writing an executive program, and it is appropriate to find S_a and C_{Sa} , a simple call to the subroutine does this with a minimum of effort. Also, once the subroutine is tested, it is always ready to perform. Write and test such a program.
- 6–42** Repeat Problem. 6–41 for the ASME-elliptic fatigue failure locus, implementing Eqs. (6–82) and (6–83).
- 6–43** Repeat Prob. 6–41 for the Smith-Dolan fatigue failure locus, implementing Eqs. (6–86) and (6–87).
- 6–44** Write and test computer subroutines or procedures that will implement
- (a) Table 6–2, returning a , b , C , and \bar{k}_a .
- (b) Equation (6–20) using Table 6–4, returning k_b .
- (c) Table 6–11, returning α , β , C , and \bar{k}_c .
- (d) Equations (6–27) and (6–75), returning \bar{k}_d and C_{kd} .
- 6–45** Write and test a computer subroutine or procedure that implements Eqs. (6–76) and (6–77), returning \bar{q} , $\hat{\sigma}_q$, and C_q .
- 6–46** Write and test a computer subroutine or procedure that implements Eq. (6–78) and Table 6–15, returning \sqrt{a} , C_{Kf} , and \bar{K}_f .

PART

3

**Design of Mechanical
Elements**



Shafts and Shaft Components

Chapter Outline

- 7-1** Introduction **348**
- 7-2** Shaft Materials **348**
- 7-3** Shaft Layout **349**
- 7-4** Shaft Design for Stress **354**
- 7-5** Deflection Considerations **367**
- 7-6** Critical Speeds for Shafts **371**
- 7-7** Miscellaneous Shaft Components **376**
- 7-8** Limits and Fits **383**

7-1 Introduction

A *shaft* is a rotating member, usually of circular cross section, used to transmit power or motion. It provides the axis of rotation, or oscillation, of elements such as gears, pulleys, flywheels, cranks, sprockets, and the like and controls the geometry of their motion. An *axle* is a nonrotating member that carries no torque and is used to support rotating wheels, pulleys, and the like. The automotive axle is not a true axle; the term is a carry-over from the horse-and-buggy era, when the wheels rotated on nonrotating members. A non-rotating axle can readily be designed and analyzed as a static beam, and will not warrant the special attention given in this chapter to the rotating shafts which are subject to fatigue loading.

There is really nothing unique about a shaft that requires any special treatment beyond the basic methods already developed in previous chapters. However, because of the ubiquity of the shaft in so many machine design applications, there is some advantage in giving the shaft and its design a closer inspection. A complete shaft design has much interdependence on the design of the components. The design of the machine itself will dictate that certain gears, pulleys, bearings, and other elements will have at least been partially analyzed and their size and spacing tentatively determined. Chapter 18 provides a complete case study of a power transmission, focusing on the overall design process. In this chapter, details of the shaft itself will be examined, including the following:

- Material selection
- Geometric layout
- Stress and strength
 - Static strength
 - Fatigue strength
- Deflection and rigidity
 - Bending deflection
 - Torsional deflection
 - Slope at bearings and shaft-supported elements
 - Shear deflection due to transverse loading of short shafts
- Vibration due to natural frequency

In deciding on an approach to shaft sizing, it is necessary to realize that a stress analysis at a specific point on a shaft can be made using only the shaft geometry in the vicinity of that point. Thus the geometry of the entire shaft is not needed. In design it is usually possible to locate the critical areas, size these to meet the strength requirements, and then size the rest of the shaft to meet the requirements of the shaft-supported elements.

The deflection and slope analyses cannot be made until the geometry of the entire shaft has been defined. Thus deflection is a function of the geometry *everywhere*, whereas the stress at a section of interest is a function of *local geometry*. For this reason, shaft design allows a consideration of stress first. Then, after tentative values for the shaft dimensions have been established, the determination of the deflections and slopes can be made.

7-2 Shaft Materials

Deflection is not affected by strength, but rather by stiffness as represented by the modulus of elasticity, which is essentially constant for all steels. For that reason, rigidity cannot be controlled by material decisions, but only by geometric decisions.

Necessary strength to resist loading stresses affects the choice of materials and their treatments. Many shafts are made from low carbon, cold-drawn or hot-rolled steel, such as ANSI 1020-1050 steels.

Significant strengthening from heat treatment and high alloy content are often not warranted. Fatigue failure is reduced moderately by increase in strength, and then only to a certain level before adverse effects in endurance limit and notch sensitivity begin to counteract the benefits of higher strength. A good practice is to start with an inexpensive, low or medium carbon steel for the first time through the design calculations. If strength considerations turn out to dominate over deflection, then a higher strength material should be tried, allowing the shaft sizes to be reduced until excess deflection becomes an issue. The cost of the material and its processing must be weighed against the need for smaller shaft diameters. When warranted, typical alloy steels for heat treatment include ANSI 1340-50, 3140-50, 4140, 4340, 5140, and 8650.

Shafts usually don't need to be surface hardened unless they serve as the actual journal of a bearing surface. Typical material choices for surface hardening include carburizing grades of ANSI 1020, 4320, 4820, and 8620.

Cold drawn steel is usually used for diameters under about 3 inches. The nominal diameter of the bar can be left unmachined in areas that do not require fitting of components. Hot rolled steel should be machined all over. For large shafts requiring much material removal, the residual stresses may tend to cause warping. If concentricity is important, it may be necessary to rough machine, then heat treat to remove residual stresses and increase the strength, then finish machine to the final dimensions.

In approaching material selection, the amount to be produced is a salient factor. For low production, turning is the usual primary shaping process. An economic viewpoint may require removing the least material. High production may permit a volume-conservative shaping method (hot or cold forming, casting), and minimum material in the shaft can become a design goal. Cast iron may be specified if the production quantity is high, and the gears are to be integrally cast with the shaft.

Properties of the shaft locally depend on its history—cold work, cold forming, rolling of fillet features, heat treatment, including quenching medium, agitation, and tempering regimen.¹

Stainless steel may be appropriate for some environments.

7-3 Shaft Layout

The general layout of a shaft to accommodate shaft elements, e.g. gears, bearings, and pulleys, must be specified early in the design process in order to perform a free body force analysis and to obtain shear-moment diagrams. The geometry of a shaft is generally that of a stepped cylinder. The use of shaft shoulders is an excellent means of axially locating the shaft elements and to carry any thrust loads. Figure 7-1 shows an example of a stepped shaft supporting the gear of a worm-gear speed reducer. Each shoulder in the shaft serves a specific purpose, which you should attempt to determine by observation.

¹See Joseph E. Shigley, Charles R. Mischke, and Thomas H. Brown, Jr. (eds-in-chief), *Standard Handbook of Machine Design*, 3rd ed., McGraw-Hill, New York, 2004. For cold-worked property prediction see Chap. 29, and for heat-treated property prediction see Chaps. 29 and 33.

Figure 7-1

A vertical worm-gear speed reducer. (Courtesy of the Cleveland Gear Company.)


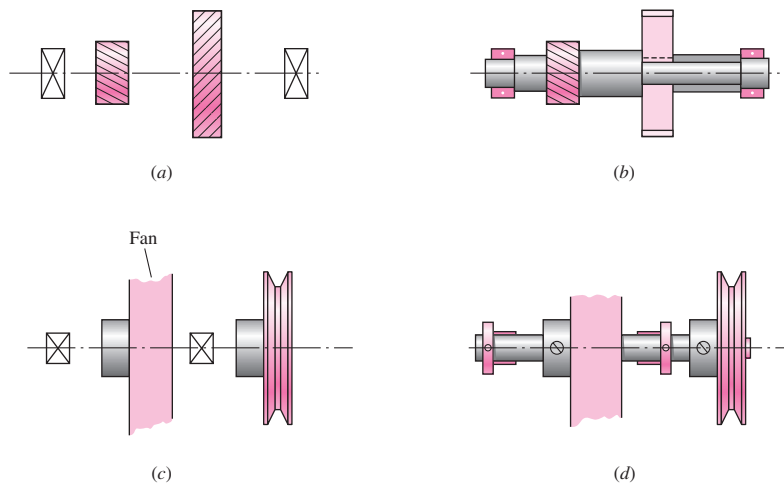


Figure 7-2

(a) Choose a shaft configuration to support and locate the two gears and two bearings. (b) Solution uses an integral pinion, three shaft shoulders, key and keyway, and sleeve. The housing locates the bearings on their outer rings and receives the thrust loads. (c) Choose fan-shaft configuration. (d) Solution uses sleeve bearings, a straight-through shaft, locating collars, and setscrews for collars, fan pulley, and fan itself. The fan housing supports the sleeve bearings.



The geometric configuration of a shaft to be designed is often simply a revision of existing models in which a limited number of changes must be made. If there is no existing design to use as a starter, then the determination of the shaft layout may have many solutions. This problem is illustrated by the two examples of Fig. 7-2. In Fig. 7-2a a geared countershaft is to be supported by two bearings. In Fig. 7-2c a fanshaft is to be configured. The solutions shown in Fig. 7-2b and 7-2d are not necessarily the best ones, but they do illustrate how the shaft-mounted devices are fixed and located in the axial direction, and how provision is made for torque transfer from one element to another. There are no absolute rules for specifying the general layout, but the following guidelines may be helpful.

Axial Layout of Components

The axial positioning of components is often dictated by the layout of the housing and other meshing components. In general, it is best to support load-carrying components between bearings, such as in Fig. 7–2*a*, rather than cantilevered outboard of the bearings, such as in Fig. 7–2*c*. Pulleys and sprockets often need to be mounted outboard for ease of installation of the belt or chain. The length of the cantilever should be kept short to minimize the deflection.

Only two bearings should be used in most cases. For extremely long shafts carrying several load-bearing components, it may be necessary to provide more than two bearing supports. In this case, particular care must be given to the alignment of the bearings.

Shafts should be kept short to minimize bending moments and deflections. Some axial space between components is desirable to allow for lubricant flow and to provide access space for disassembly of components with a puller. Load bearing components should be placed near the bearings, again to minimize the bending moment at the locations that will likely have stress concentrations, and to minimize the deflection at the load-carrying components.

The components must be accurately located on the shaft to line up with other mating components, and provision must be made to securely hold the components in position. The primary means of locating the components is to position them against a shoulder of the shaft. A shoulder also provides a solid support to minimize deflection and vibration of the component. Sometimes when the magnitudes of the forces are reasonably low, shoulders can be constructed with retaining rings in grooves, sleeves between components, or clamp-on collars. In cases where axial loads are very small, it may be feasible to do without the shoulders entirely, and rely on press fits, pins, or collars with setscrews to maintain an axial location. See Fig. 7–2*b* and 7–2*d* for examples of some of these means of axial location.

Supporting Axial Loads

In cases where axial loads are not trivial, it is necessary to provide a means to transfer the axial loads into the shaft, then through a bearing to the ground. This will be particularly necessary with helical or bevel gears, or tapered roller bearings, as each of these produces axial force components. Often, the same means of providing axial location, e.g., shoulders, retaining rings, and pins, will be used to also transmit the axial load into the shaft.

It is generally best to have only one bearing carry the axial load, to allow greater tolerances on shaft length dimensions, and to prevent binding if the shaft expands due to temperature changes. This is particularly important for long shafts. Figures 7–3 and 7–4 show examples of shafts with only one bearing carrying the axial load against a shoulder, while the other bearing is simply press-fit onto the shaft with no shoulder.

Providing for Torque Transmission

Most shafts serve to transmit torque from an input gear or pulley, through the shaft, to an output gear or pulley. Of course, the shaft itself must be sized to support the torsional stress and torsional deflection. It is also necessary to provide a means of transmitting the torque between the shaft and the gears. Common torque-transfer elements are:

- Keys
- Splines
- Setscrews

Figure 7-3

Tapered roller bearings used in a mowing machine spindle. This design represents good practice for the situation in which one or more torque-transfer elements must be mounted outboard. (Source: Redrawn from material furnished by The Timken Company.)

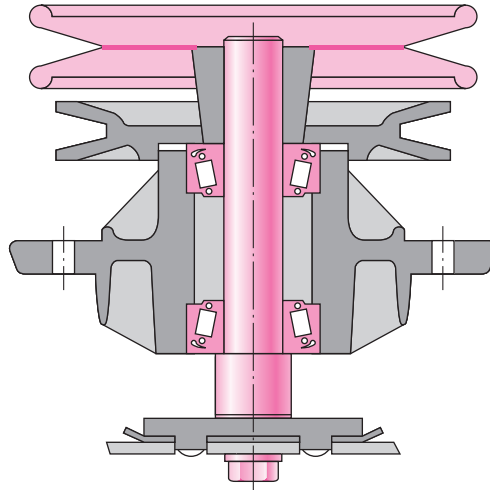
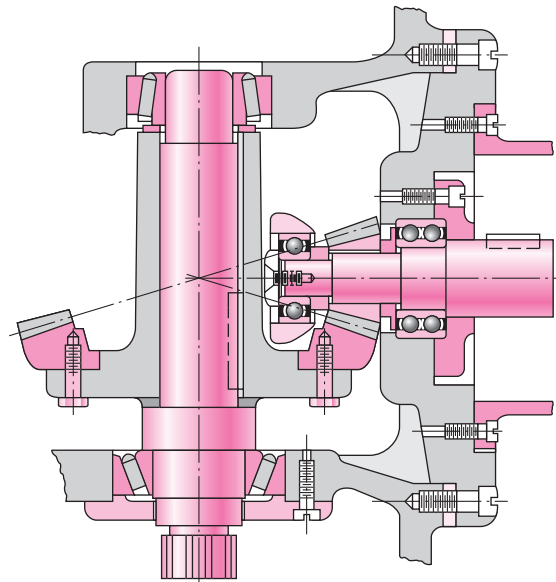


Figure 7-4

A bevel-gear drive in which both pinion and gear are straddle-mounted. (Source: Redrawn from material furnished by Gleason Machine Division.)



- Pins
- Press or shrink fits
- Tapered fits

In addition to transmitting the torque, many of these devices are designed to fail if the torque exceeds acceptable operating limits, protecting more expensive components.

Details regarding hardware components such as *keys*, *pins*, and *setscrews* are addressed in detail in Sec. 7–7. One of the most effective and economical means of transmitting moderate to high levels of torque is through a key that fits in a groove in the shaft and gear. Keyed components generally have a slip fit onto the shaft, so assembly and disassembly is easy. The key provides for positive angular orientation of the component, which is useful in cases where phase angle timing is important.

Splines are essentially stubby gear teeth formed on the outside of the shaft and on the inside of the hub of the load-transmitting component. Splines are generally much more expensive to manufacture than keys, and are usually not necessary for simple torque transmission. They are typically used to transfer high torques. One feature of a spline is that it can be made with a reasonably loose slip fit to allow for large axial motion between the shaft and component while still transmitting torque. This is useful for connecting two shafts where relative motion between them is common, such as in connecting a power takeoff (PTO) shaft of a tractor to an implement. SAE and ANSI publish standards for splines. Stress concentration factors are greatest where the spline ends and blends into the shaft, but are generally quite moderate.

For cases of low torque transmission, various means of transmitting torque are available. These include pins, setscrews in hubs, tapered fits, and press fits.

Press and shrink fits for securing hubs to shafts are used both for torque transfer and for preserving axial location. The resulting stress-concentration factor is usually quite small. See Sec. 7–8 for guidelines regarding appropriate sizing and tolerancing to transmit torque with press and shrink fits. A similar method is to use a split hub with screws to clamp the hub to the shaft. This method allows for disassembly and lateral adjustments. Another similar method uses a two-part hub consisting of a split inner member that fits into a tapered hole. The assembly is then tightened to the shaft with screws, which forces the inner part into the wheel and clamps the whole assembly against the shaft.

Tapered fits between the shaft and the shaft-mounted device, such as a wheel, are often used on the overhanging end of a shaft. Screw threads at the shaft end then permit the use of a nut to lock the wheel tightly to the shaft. This approach is useful because it can be disassembled, but it does not provide good axial location of the wheel on the shaft.

At the early stages of the shaft layout, the important thing is to select an appropriate means of transmitting torque, and to determine how it affects the overall shaft layout. It is necessary to know where the shaft discontinuities, such as keyways, holes, and splines, will be in order to determine critical locations for analysis.

Assembly and Disassembly

Consideration should be given to the method of assembling the components onto the shaft, and the shaft assembly into the frame. This generally requires the largest diameter in the center of the shaft, with progressively smaller diameters towards the ends to allow components to be slid on from the ends. If a shoulder is needed on both sides of a component, one of them must be created by such means as a retaining ring or by a sleeve between two components. The gearbox itself will need means to physically position the shaft into its bearings, and the bearings into the frame. This is typically accomplished by providing access through the housing to the bearing at one end of the shaft. See Figs. 7–5 through 7–8 for examples.

Figure 7-5

Arrangement showing bearing inner rings press-fitted to shaft while outer rings float in the housing. The axial clearance should be sufficient only to allow for machinery vibrations. Note the labyrinth seal on the right.

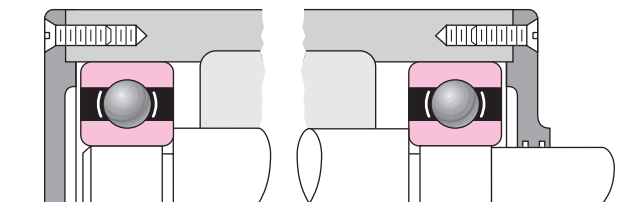


Figure 7-6

Similar to the arrangement of Fig. 7-5 except that the outer bearing rings are preloaded.

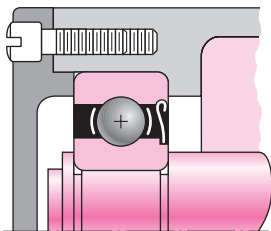
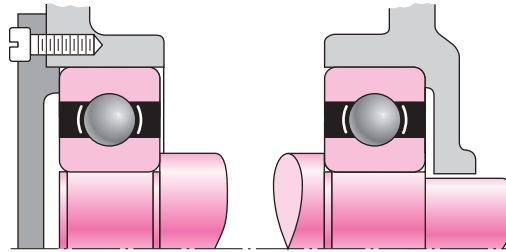


Figure 7-8

This arrangement is similar to Fig. 7-7 in that the left-hand bearing positions the entire shaft assembly. In this case the inner ring is secured to the shaft using a snap ring. Note the use of a shield to prevent dirt generated from within the machine from entering the bearing.

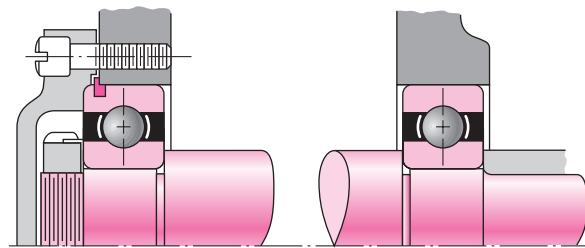


Figure 7-7

In this arrangement the inner ring of the left-hand bearing is locked to the shaft between a nut and a shaft shoulder. The locknut and washer are AFBMA standard. The snap ring in the outer race is used to positively locate the shaft assembly in the axial direction. Note the floating right-hand bearing and the grinding runout grooves in the shaft.

When components are to be press-fit to the shaft, the shaft should be designed so that it is not necessary to press the component down a long length of shaft. This may require an extra change in diameter, but it will reduce manufacturing and assembly cost by only requiring the close tolerance for a short length.

Consideration should also be given to the necessity of disassembling the components from the shaft. This requires consideration of issues such as accessibility of retaining rings, space for pullers to access bearings, openings in the housing to allow pressing the shaft or bearings out, etc.

7-4 Shaft Design for Stress

Critical Locations

It is not necessary to evaluate the stresses in a shaft at every point; a few potentially critical locations will suffice. Critical locations will usually be on the outer surface, at axial locations where the bending moment is large, where the torque is present, and where stress concentrations exist. By direct comparison of various points along the shaft, a few critical locations can be identified upon which to base the design. An assessment of typical stress situations will help.

Most shafts will transmit torque through a portion of the shaft. Typically the torque comes into the shaft at one gear and leaves the shaft at another gear. A free body diagram of the shaft will allow the torque at any section to be determined. The torque is often relatively constant at steady state operation. The shear stress due to the torsion will be greatest on outer surfaces.

The bending moments on a shaft can be determined by shear and bending moment diagrams. Since most shaft problems incorporate gears or pulleys that introduce forces in two planes, the shear and bending moment diagrams will generally be needed in two planes. Resultant moments are obtained by summing moments as vectors at points of interest along the shaft. The phase angle of the moments is not important since the shaft rotates. A steady bending moment will produce a completely reversed moment on a rotating shaft, as a specific stress element will alternate from compression to tension in every revolution of the shaft. The normal stress due to bending moments will be greatest on the outer surfaces. In situations where a bearing is located at the end of the shaft, stresses near the bearing are often not critical since the bending moment is small.

Axial stresses on shafts due to the axial components transmitted through helical gears or tapered roller bearings will almost always be negligibly small compared to the bending moment stress. They are often also constant, so they contribute little to fatigue. Consequently, it is usually acceptable to neglect the axial stresses induced by the gears and bearings when bending is present in a shaft. If an axial load is applied to the shaft in some other way, it is not safe to assume it is negligible without checking magnitudes.

Shaft Stresses

Bending, torsion, and axial stresses may be present in both midrange and alternating components. For analysis, it is simple enough to combine the different types of stresses into alternating and midrange von Mises stresses, as shown in Sec. 6–14, p. 309. It is sometimes convenient to customize the equations specifically for shaft applications. Axial loads are usually comparatively very small at critical locations where bending and torsion dominate, so they will be left out of the following equations. The fluctuating stresses due to bending and torsion are given by

$$\sigma_a = K_f \frac{M_a c}{I} \quad \sigma_m = K_f \frac{M_m c}{I} \quad (7-1)$$

$$\tau_a = K_{fs} \frac{T_a c}{J} \quad \tau_m = K_{fs} \frac{T_m c}{J} \quad (7-2)$$

where M_m and M_a are the midrange and alternating bending moments, T_m and T_a are the midrange and alternating torques, and K_f and K_{fs} are the fatigue stress concentration factors for bending and torsion, respectively.

Assuming a solid shaft with round cross section, appropriate geometry terms can be introduced for c , I , and J resulting in

$$\sigma_a = K_f \frac{32M_a}{\pi d^3} \quad \sigma_m = K_f \frac{32M_m}{\pi d^3} \quad (7-3)$$

$$\tau_a = K_{fs} \frac{16T_a}{\pi d^3} \quad \tau_m = K_{fs} \frac{16T_m}{\pi d^3} \quad (7-4)$$

Combining these stresses in accordance with the distortion energy failure theory, the von Mises stresses for rotating round, solid shafts, neglecting axial loads, are given by

$$\sigma'_a = (\sigma_a^2 + 3\tau_a^2)^{1/2} = \left[\left(\frac{32K_f M_a}{\pi d^3} \right)^2 + 3 \left(\frac{16K_{fs} T_a}{\pi d^3} \right)^2 \right]^{1/2} \quad (7-5)$$

$$\sigma'_m = (\sigma_m^2 + 3\tau_m^2)^{1/2} = \left[\left(\frac{32K_f M_m}{\pi d^3} \right)^2 + 3 \left(\frac{16K_{fs} T_m}{\pi d^3} \right)^2 \right]^{1/2} \quad (7-6)$$

Note that the stress concentration factors are sometimes considered optional for the midrange components with ductile materials, because of the capacity of the ductile material to yield locally at the discontinuity.

These equivalent alternating and midrange stresses can be evaluated using an appropriate failure curve on the modified Goodman diagram (See Sec. 6–12, p. 295, and Fig. 6–27). For example, the fatigue failure criteria for the modified Goodman line as expressed previously in Eq. (6–46) is

$$\frac{1}{n} = \frac{\sigma'_a}{S_e} + \frac{\sigma'_m}{S_{ut}}$$

Substitution of σ'_a and σ'_m from Eqs. (7–5) and (7–6) results in

$$\frac{1}{n} = \frac{16}{\pi d^3} \left\{ \frac{1}{S_e} [4(K_f M_a)^2 + 3(K_{fs} T_a)^2]^{1/2} + \frac{1}{S_{ut}} [4(K_f M_m)^2 + 3(K_{fs} T_m)^2]^{1/2} \right\}$$

For design purposes, it is also desirable to solve the equation for the diameter. This results in

$$d = \left(\frac{16n}{\pi} \left\{ \frac{1}{S_e} [4(K_f M_a)^2 + 3(K_{fs} T_a)^2]^{1/2} + \frac{1}{S_{ut}} [4(K_f M_m)^2 + 3(K_{fs} T_m)^2]^{1/2} \right\} \right)^{1/3}$$

Similar expressions can be obtained for any of the common failure criteria by substituting the von Mises stresses from Eqs. (7–5) and (7–6) into any of the failure criteria expressed by Eqs. (6–45) through (6–48), p. 298. The resulting equations for several of the commonly used failure curves are summarized below. The names given to each set of equations identifies the significant failure theory, followed by a fatigue failure locus name. For example, DE-Gerber indicates the stresses are combined using the distortion energy (DE) theory, and the Gerber criteria is used for the fatigue failure.

DE-Goodman

$$\frac{1}{n} = \frac{16}{\pi d^3} \left\{ \frac{1}{S_e} [4(K_f M_a)^2 + 3(K_{fs} T_a)^2]^{1/2} + \frac{1}{S_{ut}} [4(K_f M_m)^2 + 3(K_{fs} T_m)^2]^{1/2} \right\} \quad (7-7)$$

$$d = \left(\frac{16n}{\pi} \left\{ \frac{1}{S_e} [4(K_f M_a)^2 + 3(K_{fs} T_a)^2]^{1/2} + \frac{1}{S_{ut}} [4(K_f M_m)^2 + 3(K_{fs} T_m)^2]^{1/2} \right\} \right)^{1/3} \quad (7-8)$$

DE-Gerber

$$\frac{1}{n} = \frac{8A}{\pi d^3 S_e} \left\{ 1 + \left[1 + \left(\frac{2BS_e}{AS_{ut}} \right)^2 \right]^{1/2} \right\} \quad (7-9)$$

$$d = \left(\frac{8nA}{\pi S_e} \left\{ 1 + \left[1 + \left(\frac{2BS_e}{AS_{ut}} \right)^2 \right]^{1/2} \right\} \right)^{1/3} \quad (7-10)$$

where

$$A = \sqrt{4(K_f M_a)^2 + 3(K_{fs} T_a)^2}$$

$$B = \sqrt{4(K_f M_m)^2 + 3(K_{fs} T_m)^2}$$

DE-ASME Elliptic

$$\frac{1}{n} = \frac{16}{\pi d^3} \left[4 \left(\frac{K_f M_a}{S_e} \right)^2 + 3 \left(\frac{K_{fs} T_a}{S_e} \right)^2 + 4 \left(\frac{K_f M_m}{S_y} \right)^2 + 3 \left(\frac{K_{fs} T_m}{S_y} \right)^2 \right]^{1/2} \quad (7-11)$$

$$d = \left\{ \frac{16n}{\pi} \left[4 \left(\frac{K_f M_a}{S_e} \right)^2 + 3 \left(\frac{K_{fs} T_a}{S_e} \right)^2 + 4 \left(\frac{K_f M_m}{S_y} \right)^2 + 3 \left(\frac{K_{fs} T_m}{S_y} \right)^2 \right]^{1/2} \right\}^{1/3} \quad (7-12)$$

DE-Soderberg

$$\frac{1}{n} = \frac{16}{\pi d^3} \left\{ \frac{1}{S_e} [4(K_f M_a)^2 + 3(K_{fs} T_a)^2]^{1/2} + \frac{1}{S_{yt}} [4(K_f M_m)^2 + 3(K_{fs} T_m)^2]^{1/2} \right\} \quad (7-13)$$

$$d = \left(\frac{16n}{\pi} \left\{ \frac{1}{S_e} [4(K_f M_a)^2 + 3(K_{fs} T_a)^2]^{1/2} + \frac{1}{S_{yt}} [4(K_f M_m)^2 + 3(K_{fs} T_m)^2]^{1/2} \right\} \right)^{1/3} \quad (7-14)$$

For a rotating shaft with constant bending and torsion, the bending stress is completely reversed and the torsion is steady. Equations (7-7) through (7-14) can be simplified by setting M_m and T_a equal to 0, which simply drops out some of the terms.

Note that in an analysis situation in which the diameter is known and the factor of safety is desired, as an alternative to using the specialized equations above, it is always still valid to calculate the alternating and mid-range stresses using Eqs. (7-5) and (7-6), and substitute them into one of the equations for the failure criteria, Eqs. (6-45) through (6-48), and solve directly for n . In a design situation, however, having the equations pre-solved for diameter is quite helpful.

It is always necessary to consider the possibility of static failure in the first load cycle. The Soderberg criteria inherently guards against yielding, as can be seen by noting that its failure curve is conservatively within the yield (Langer) line on Fig. 6-27, p. 297. The ASME Elliptic also takes yielding into account, but is not entirely conservative

throughout its entire range. This is evident by noting that it crosses the yield line in Fig. 6–27. The Gerber and modified Goodman criteria do not guard against yielding, requiring a separate check for yielding. A von Mises maximum stress is calculated for this purpose.

$$\begin{aligned}\sigma'_{\max} &= [(\sigma_m + \sigma_a)^2 + 3(\tau_m + \tau_a)^2]^{1/2} \\ &= \left[\left(\frac{32K_f(M_m + M_a)}{\pi d^3} \right)^2 + 3 \left(\frac{16K_{fs}(T_m + T_a)}{\pi d^3} \right)^2 \right]^{1/2}\end{aligned}\quad (7-15)$$

To check for yielding, this von Mises maximum stress is compared to the yield strength, as usual.

$$n_y = \frac{S_y}{\sigma'_{\max}} \quad (7-16)$$

For a quick, conservative check, an estimate for σ'_{\max} can be obtained by simply adding σ'_a and σ'_m . ($\sigma'_a + \sigma'_m$) will always be greater than or equal to σ'_{\max} , and will therefore be conservative.

EXAMPLE 7-1

At a machined shaft shoulder the small diameter d is 1.100 in, the large diameter D is 1.65 in, and the fillet radius is 0.11 in. The bending moment is 1260 lbf · in and the steady torsion moment is 1100 lbf · in. The heat-treated steel shaft has an ultimate strength of $S_{ut} = 105$ kpsi and a yield strength of $S_y = 82$ kpsi. The reliability goal is 0.99.

- Determine the fatigue factor of safety of the design using each of the fatigue failure criteria described in this section.
- Determine the yielding factor of safety.

Solution

(a) $D/d = 1.65/1.100 = 1.50$, $r/d = 0.11/1.100 = 0.10$, $K_t = 1.68$ (Fig. A-15-9), $K_{ts} = 1.42$ (Fig. A-15-8), $q = 0.85$ (Fig. 6-20), $q_{\text{shear}} = 0.92$ (Fig. 6-21).

From Eq. (6-32),

$$K_f = 1 + 0.85(1.68 - 1) = 1.58$$

$$K_{fs} = 1 + 0.92(1.42 - 1) = 1.39$$

$$\text{Eq. (6-8):} \quad S'_e = 0.5(105) = 52.5 \text{ kpsi}$$

$$\text{Eq. (6-19):} \quad k_a = 2.70(105)^{-0.265} = 0.787$$

$$\text{Eq. (6-20):} \quad k_b = \left(\frac{1.100}{0.30} \right)^{-0.107} = 0.870$$

$$k_c = k_d = k_f = 1$$

Table 6–6: $k_e = 0.814$

$$S_e = 0.787(0.870)0.814(52.5) = 29.3 \text{ kpsi}$$

For a rotating shaft, the constant bending moment will create a completely reversed bending stress.

$$M_a = 1260 \text{ lbf} \cdot \text{in} \quad T_m = 1100 \text{ lbf} \cdot \text{in} \quad M_m = T_a = 0$$

Applying Eq. (7–7) for the DE-Goodman criteria gives

$$\frac{1}{n} = \frac{16}{\pi(1.1)^3} \left\{ \frac{[4(1.58 \cdot 1260)^2]^{1/2}}{29\,300} + \frac{[3(1.39 \cdot 1100)^2]^{1/2}}{105\,000} \right\} = 0.615$$

Answer $n = 1.62$ DE-Goodman

Similarly, applying Eqs. (7–9), (7–11), and (7–13) for the other failure criteria,

Answer $n = 1.87$ DE-Gerber

Answer $n = 1.88$ DE-ASME Elliptic

Answer $n = 1.56$ DE-Soderberg

For comparison, consider an equivalent approach of calculating the stresses and applying the fatigue failure criteria directly. From Eqs. (7–5) and (7–6),

$$\sigma'_a = \left[\left(\frac{32 \cdot 1.58 \cdot 1260}{\pi(1.1)^3} \right)^2 \right]^{1/2} = 15\,235 \text{ psi}$$

$$\sigma'_m = \left[3 \left(\frac{16 \cdot 1.39 \cdot 1100}{\pi(1.1)^3} \right)^2 \right]^{1/2} = 10\,134 \text{ psi}$$

Taking, for example, the Goodman failure criteria, application of Eq. (6–46) gives

$$\frac{1}{n} = \frac{\sigma'_a}{S_e} + \frac{\sigma'_m}{S_{ut}} = \frac{15\,235}{29\,300} + \frac{10\,134}{105\,000} = 0.616$$

$$n = 1.62$$

which is identical with the previous result. The same process could be used for the other failure criteria.

(b) For the yielding factor of safety, determine an equivalent von Mises maximum stress using Eq. (7–15).

$$\sigma'_{\max} = \left[\left(\frac{32(1.58)(1260)}{\pi(1.1)^3} \right)^2 + 3 \left(\frac{16(1.39)(1100)}{\pi(1.1)^3} \right)^2 \right]^{1/2} = 18\,300 \text{ psi}$$

Answer $n_y = \frac{S_y}{\sigma'_{\max}} = \frac{82\,000}{18\,300} = 4.48$

For comparison, a quick and very conservative check on yielding can be obtained by replacing σ'_{\max} with $\sigma'_a + \sigma'_m$. This just saves the extra time of calculating σ'_{\max} if σ'_a and σ'_m have already been determined. For this example,

$$n_y = \frac{S_y}{\sigma'_a + \sigma'_m} = \frac{82\,000}{15\,235 + 10\,134} = 3.23$$

which is quite conservative compared with $n_y = 4.48$.

Estimating Stress Concentrations

The stress analysis process for fatigue is highly dependent on stress concentrations. Stress concentrations for shoulders and keyways are dependent on size specifications that are not known the first time through the process. Fortunately, since these elements are usually of standard proportions, it is possible to estimate the stress concentration factors for initial design of the shaft. These stress concentrations will be fine-tuned in successive iterations, once the details are known.

Shoulders for bearing and gear support should match the catalog recommendation for the specific bearing or gear. A look through bearing catalogs shows that a typical bearing calls for the ratio of D/d to be between 1.2 and 1.5. For a first approximation, the worst case of 1.5 can be assumed. Similarly, the fillet radius at the shoulder needs to be sized to avoid interference with the fillet radius of the mating component. There is a significant variation in typical bearings in the ratio of fillet radius versus bore diameter, with r/d typically ranging from around 0.02 to 0.06. A quick look at the stress concentration charts (Figures A-15-8 and A-15-9) shows that the stress concentrations for bending and torsion increase significantly in this range. For example, with $D/d = 1.5$ for bending, $K_t = 2.7$ at $r/d = 0.02$, and reduces to $K_t = 2.1$ at $r/d = 0.05$, and further down to $K_t = 1.7$ at $r/d = 0.1$. This indicates that this is an area where some attention to detail could make a significant difference. Fortunately, in most cases the shear and bending moment diagrams show that bending moments are quite low near the bearings, since the bending moments from the ground reaction forces are small.

In cases where the shoulder at the bearing is found to be critical, the designer should plan to select a bearing with generous fillet radius, or consider providing for a larger fillet radius on the shaft by relieving it into the base of the shoulder as shown in Fig. 7-9a. This effectively creates a dead zone in the shoulder area that does not

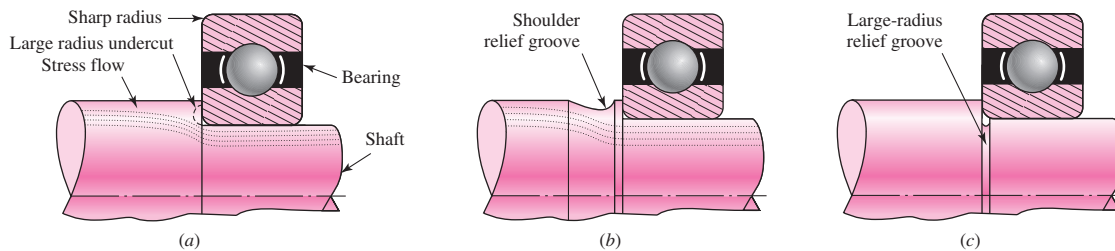


Figure 7-9

Techniques for reducing stress concentration at a shoulder supporting a bearing with a sharp radius. (a) Large radius undercut into the shoulder. (b) Large radius relief groove into the back of the shoulder. (c) Large radius relief groove into the small diameter section of the shaft.

carry the bending stresses, as shown by the stress flow lines. A shoulder relief groove as shown in Fig. 7–9*b* can accomplish a similar purpose. Another option is to cut a large-radius relief groove into the small diameter of the shaft, as shown in Fig. 7–9*c*. This has the disadvantage of reducing the cross-sectional area, but is often used in cases where it is useful to provide a relief groove before the shoulder to prevent the grinding or turning operation from having to go all the way to the shoulder.

For the standard shoulder fillet, for estimating K_t values for the first iteration, an r/d ratio should be selected so K_t values can be obtained. For the worst end of the spectrum, with $r/d = 0.02$ and $D/d = 1.5$, K_t values from the stress concentration charts for shoulders indicate 2.7 for bending, 2.2 for torsion, and 3.0 for axial.

A keyway will produce a stress concentration near a critical point where the load-transmitting component is located. The stress concentration in an end-milled keyseat is a function of the ratio of the radius r at the bottom of the groove and the shaft diameter d . For early stages of the design process, it is possible to estimate the stress concentration for keyways regardless of the actual shaft dimensions by assuming a typical ratio of $r/d = 0.02$. This gives $K_t = 2.2$ for bending and $K_{ts} = 3.0$ for torsion, assuming the key is in place.

Figures A–15–16 and A–15–17 give values for stress concentrations for flat-bottomed grooves such as used for retaining rings. By examining typical retaining ring specifications in vendor catalogs, it can be seen that the groove width is typically slightly greater than the groove depth, and the radius at the bottom of the groove is around 1/10 of the groove width. From Figs. A–15–16 and A–15–17, stress concentration factors for typical retaining ring dimensions are around 5 for bending and axial, and 3 for torsion. Fortunately, the small radius will often lead to a smaller notch sensitivity, reducing K_f .

Table 7–1 summarizes some typical stress concentration factors for the first iteration in the design of a shaft. Similar estimates can be made for other features. The point is to notice that stress concentrations are essentially normalized so that they are dependent on ratios of geometry features, not on the specific dimensions. Consequently, by estimating the appropriate ratios, the first iteration values for stress concentrations can be obtained. These values can be used for initial design, then actual values inserted once diameters have been determined.

Table 7-1

First Iteration Estimates
for Stress Concentration
Factors K_t .

Warning: These factors are only estimates for use when actual dimensions are not yet determined. Do not use these once actual dimensions are available.

	Bending	Torsional	Axial
Shoulder fillet—sharp ($r/d = 0.02$)	2.7	2.2	3.0
Shoulder fillet—well rounded ($r/d = 0.1$)	1.7	1.5	1.9
End-mill keyseat ($r/d = 0.02$)	2.2	3.0	—
Sled runner keyseat	1.7	—	—
Retaining ring groove	5.0	3.0	5.0

Missing values in the table are not readily available.

EXAMPLE 7-2

This example problem is part of a larger case study. See Chap. 18 for the full context.

A double reduction gearbox design has developed to the point that the general layout and axial dimensions of the countershaft carrying two spur gears has been proposed, as shown in Fig. 7-10. The gears and bearings are located and supported by shoulders, and held in place by retaining rings. The gears transmit torque through keys. Gears have been specified as shown, allowing the tangential and radial forces transmitted through the gears to the shaft to be determined as follows.

$$\begin{aligned} W_{23}^t &= 540 \text{ lbf} & W_{54}^t &= -2431 \text{ lbf} \\ W_{23}^r &= -197 \text{ lbf} & W_{54}^r &= -885 \text{ lbf} \end{aligned}$$

where the superscripts t and r represent tangential and radial directions, respectively; and, the subscripts 23 and 54 represent the forces exerted by gears 2 and 5 (not shown) on gears 3 and 4, respectively.

Proceed with the next phase of the design, in which a suitable material is selected, and appropriate diameters for each section of the shaft are estimated, based on providing sufficient fatigue and static stress capacity for infinite life of the shaft, with minimum safety factors of 1.5.

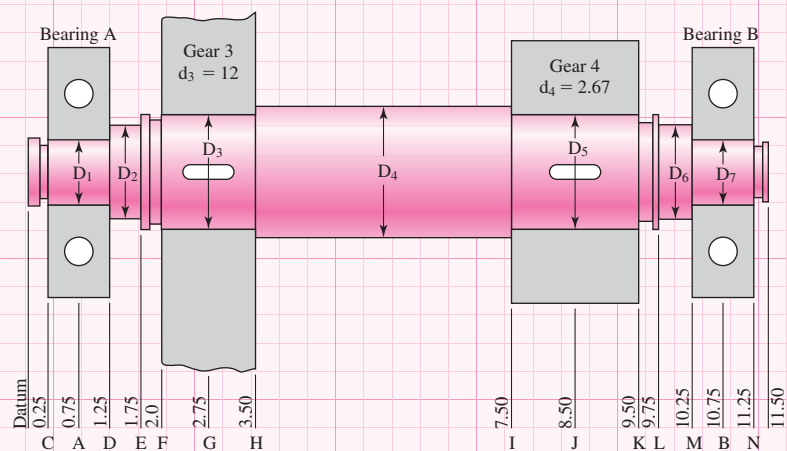


Figure 7-10

Shaft layout for Example 7-2. Dimensions in inches.

Solution

Perform free body diagram analysis to get reaction forces at the bearings.

$$R_{Az} = 115.0 \text{ lbf}$$

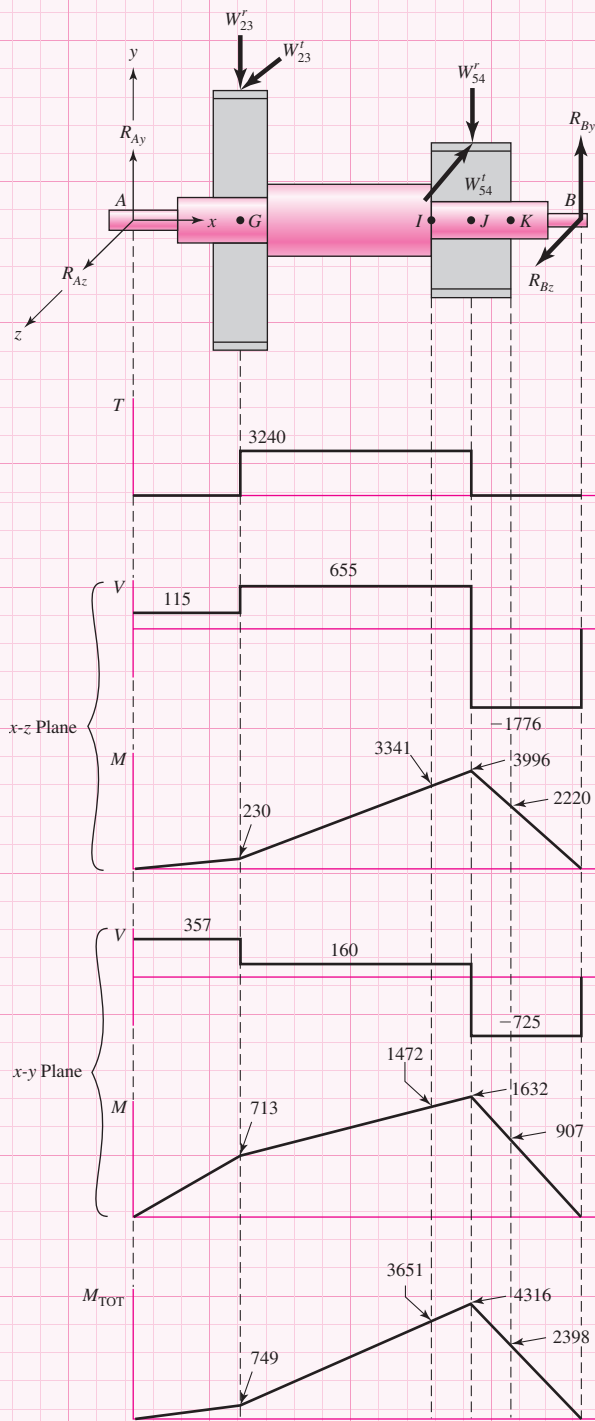
$$R_{Ay} = 356.7 \text{ lbf}$$

$$R_{Bz} = 1776.0 \text{ lbf}$$

$$R_{By} = 725.3 \text{ lbf}$$

From ΣM_x , find the torque in the shaft between the gears,
 $T = W'_{23}(d_3/2) = 540(12/2) = 3240 \text{ lbf} \cdot \text{in}$

Generate shear-moment diagrams for two planes.



Combine orthogonal planes as vectors to get total moments, e.g. at J, $\sqrt{3996^2 + 1632^2} = 4316 \text{ lbf} \cdot \text{in}$.

Start with Point I, where the bending moment is high, there is a stress concentration at the shoulder, and the torque is present.

$$\text{At } I, M_a = 3651 \text{ lbf-in, } T_m = 3240 \text{ lbf-in, } M_m = T_a = 0$$

Assume generous fillet radius for gear at I.

From Table 7-1, estimate $K_t = 1.7$, $K_{ts} = 1.5$. For quick, conservative first pass, assume $K_f = K_t$, $K_{fs} = K_{ts}$.

Choose inexpensive steel, 1020 CD, with $S_{ut} = 68$ kpsi. For S_e ,

$$\text{Eq. (6-19)} \quad k_a = aS_{ut}^b = 2.7(68)^{-0.265} = 0.883$$

Guess $k_b = 0.9$. Check later when d is known.

$$k_c = k_d = k_e = 1$$

$$\text{Eq. (6-18)} \quad S_e = (0.883)(0.9)(0.5)(68) = 27.0 \text{ kpsi.}$$

For first estimate of the small diameter at the shoulder at point I, use the DE-Goodman criterion of Eq. (7-8). This criterion is good for the initial design, since it is simple and conservative. With $M_m = T_a = 0$, Eq. (7-8) reduces to

$$d = \left\{ \frac{16n}{\pi} \left(\frac{2(K_f M_a)}{S_e} + \frac{[3(K_{fs} T_m)^2]^{1/2}}{S_{ut}} \right) \right\}^{1/3}$$

$$d = \left\{ \frac{16(1.5)}{\pi} \left(\frac{2(1.7)(3651)}{27000} + \frac{\{3[(1.5)(3240)]^2\}^{1/2}}{68000} \right) \right\}^{1/3}$$

$$d = 1.65 \text{ in.}$$

All estimates have probably been conservative, so select the next standard size below 1.65 in. and check, $d = 1.625$ in.

A typical D/d ratio for support at a shoulder is $D/d = 1.2$, thus, $D = 1.2(1.625) = 1.95$ in. Increase to $D = 2.0$ in. A nominal 2 in. cold-drawn shaft diameter can be used. Check if estimates were acceptable.

$$D/d = 2/1.625 = 1.23$$

Assume fillet radius $r = d/10 \cong 0.16$ in. $r/d = 0.1$

$$K_t = 1.6 \text{ (Fig. A-15-9)}, q = 0.82 \text{ (Fig. 6-20)}$$

$$\text{Eq. (6-32)} \quad K_f = 1 + 0.82(1.6 - 1) = 1.49$$

$$K_{ts} = 1.35 \text{ (Fig. A-15-8)}, q_s = 0.95 \text{ (Fig. 6-21)}$$

$$K_{fs} = 1 + 0.95(1.35 - 1) = 1.33$$

$$k_a = 0.883 \text{ (no change)}$$

$$\text{Eq. (6-20)} \quad k_b = \left(\frac{1.625}{0.3} \right)^{-0.107} = 0.835$$

$$S_e = (0.883)(0.835)(0.5)(68) = 25.1 \text{ kpsi}$$

$$\text{Eq. (7-5)} \quad \sigma'_a = \frac{32K_f M_a}{\pi d^3} = \frac{32(1.49)(3651)}{\pi(1.625)^3} = 12910 \text{ psi}$$

$$\text{Eq. (7-6)} \quad \sigma'_m = \left[3 \left(\frac{16K_{fs} T_m}{\pi d^3} \right)^2 \right]^{1/2} = \frac{\sqrt{3}(16)(1.33)(3240)}{\pi(1.625)^3} = 8859 \text{ psi}$$

Using Goodman criterion

$$\frac{1}{n_f} = \frac{\sigma'_a}{S_e} + \frac{\sigma'_m}{S_{ut}} = \frac{12910}{25100} + \frac{8859}{68000} = 0.645$$

$$n_f = 1.55$$

Note that we could have used Eq. (7-7) directly.
Check yielding.

$$n_y = \frac{S_y}{\sigma'_{\max}} > \frac{S_y}{\sigma'_a + \sigma'_m} = \frac{57\,000}{12\,910 + 8\,859} = 2.62$$

Also check this diameter at the end of the keyway, just to the right of point *I*, and at the groove at point *K*. From moment diagram, estimate *M* at end of keyway to be $M = 3750$ lbf-in.

Assume the radius at the bottom of the keyway will be the standard $r/d = 0.02$, $r = 0.02 d = 0.02 (1.625) = 0.0325$ in.

$$K_t = 2.14 \text{ (Fig. A-15-18), } q = 0.65 \text{ (Fig. 6-20)}$$

$$K_f = 1 + 0.65(2.14 - 1) = 1.74$$

$$K_{ts} = 3.0 \text{ (Fig. A-15-19), } q_s = 0.9 \text{ (Fig. 6-21)}$$

$$K_{fs} = 1 + 0.9(3 - 1) = 2.8$$

$$\sigma'_a = \frac{32K_f M_a}{\pi d^3} = \frac{32(1.74)(3750)}{\pi(1.625)^3} = 15\,490 \text{ psi}$$

$$\sigma'_m = \sqrt{3}(16) \frac{K_{fs} T_m}{\pi d^3} = \frac{\sqrt{3}(16)(2.8)(3240)}{\pi(1.625)^3} = 18\,650 \text{ psi}$$

$$\frac{1}{n_f} = \frac{\sigma'_a}{S_e} + \frac{\sigma'_m}{S_{ut}} = \frac{15\,490}{25\,100} + \frac{18\,650}{68\,000} = 0.891$$

$$n_f = 1.12$$

The keyway turns out to be more critical than the shoulder. We can either increase the diameter, or use a higher strength material. Unless the deflection analysis shows a need for larger diameters, let us choose to increase the strength. We started with a very low strength, and can afford to increase it some to avoid larger sizes. Try 1050 CD, with $S_{ut} = 100$ kpsi.

Recalculate factors affected by S_{ut} , i.e. $k_a \rightarrow S_e$; $q \rightarrow K_f \rightarrow \sigma'_a$

$$k_a = 2.7(100)^{-0.265} = 0.797, \quad S_e = 0.797(0.835)(0.5)(100) = 33.3 \text{ kpsi}$$

$$q = 0.72, \quad K_f = 1 + 0.72(2.14 - 1) = 1.82$$

$$\sigma'_a = \frac{32(1.82)(3750)}{\pi(1.625)^3} = 16\,200 \text{ psi}$$

$$\frac{1}{n_f} = \frac{16\,200}{33\,300} + \frac{18\,650}{100\,000} = 0.673$$

$$n_f = 1.49$$

Since the Goodman criterion is conservative, we will accept this as close enough to the requested 1.5.

Check at the groove at *K*, since K_t for flat-bottomed grooves are often very high. From the torque diagram, note that no torque is present at the groove. From the moment diagram, $M_a = 2398$ lbf · in, $M_m = T_a = T_m = 0$. To quickly check if this location is potentially critical just use $K_f = K_t = 5.0$ as an estimate, from Table 7-1.

$$\sigma_a = \frac{32K_f M_a}{\pi d^3} = \frac{32(5)(2398)}{\pi(1.625)^3} = 28\,460 \text{ psi}$$

$$n_f = \frac{S_e}{\sigma_a} = \frac{33\,300}{28\,460} = 1.17$$

This is low. We will look up data for a specific retaining ring to obtain K_f more accurately. With a quick on-line search of a retaining ring specification using the website www.globalspec.com, appropriate groove specifications for a retaining ring for a shaft diameter of 1.625 in are obtained as follows: width, $a = 0.068$ in; depth, $t = 0.048$ in; and corner radius at bottom of groove, $r = 0.01$ in. From Fig. A-15-16, with $r/t = 0.01/0.048 = 0.208$, and $a/t = 0.068/0.048 = 1.42$

$$K_t = 4.3, q = 0.65 \text{ (Fig. 6-20)}$$

$$K_f = 1 + 0.65(4.3 - 1) = 3.15$$

$$\sigma_a = \frac{32K_f M_a}{\pi d^3} = \frac{32(3.15)(2398)}{\pi(1.625)^3} = 17\,930 \text{ psi}$$

$$n_f = \frac{S_e}{\sigma_a} = \frac{33\,300}{17\,930} = 1.86$$

Quickly check if point M might be critical. Only bending is present, and the moment is small, but the diameter is small and the stress concentration is high for a sharp fillet required for a bearing. From the moment diagram, $M_a = 959 \text{ lbf} \cdot \text{in}$, and $M_m = T_m = T_a = 0$.

Estimate $K_t = 2.7$ from Table 7-1, $d = 1.0$ in, and fillet radius r to fit a typical bearing.

$$r/d = 0.02, r = 0.02(1) = 0.02$$

$$q = 0.7 \text{ (Fig. 6-20)}$$

$$K_f = 1 + (0.7)(2.7 - 1) = 2.19$$

$$\sigma_a = \frac{32K_f M_a}{\pi d^3} = \frac{32(2.19)(959)}{\pi(1)^3} = 21\,390 \text{ psi}$$

$$n_f = \frac{S_e}{\sigma_a} = \frac{33\,300}{21\,390} = 1.56$$

Should be OK. Close enough to recheck after bearing is selected.

With the diameters specified for the critical locations, fill in trial values for the rest of the diameters, taking into account typical shoulder heights for bearing and gear support.

$$D_1 = D_7 = 1.0 \text{ in}$$

$$D_2 = D_6 = 1.4 \text{ in}$$

$$D_3 = D_5 = 1.625 \text{ in}$$

$$D_4 = 2.0 \text{ in}$$

The bending moments are much less on the left end of shaft, so D_1 , D_2 , and D_3 could be smaller. However, unless weight is an issue, there is little advantage to requiring more material removal. Also, the extra rigidity may be needed to keep deflections small.

Table 7-2

Typical Maximum
Ranges for Slopes and
Transverse Deflections

Slopes	
Tapered roller	0.0005–0.0012 rad
Cylindrical roller	0.0008–0.0012 rad
Deep-groove ball	0.001–0.003 rad
Spherical ball	0.026–0.052 rad
Self-align ball	0.026–0.052 rad
Uncrowned spur gear	< 0.0005 rad
Transverse deflections	
Spur gears with $P < 10$ teeth/in	0.010 in
Spur gears with $11 < P < 19$	0.005 in
Spur gears with $20 < P < 50$	0.003 in

7-5 Deflection Considerations

Deflection analysis at even a single point of interest requires complete geometry information for the entire shaft. For this reason, it is desirable to design the dimensions at critical locations to handle the stresses, and fill in reasonable estimates for all other dimensions, before performing a deflection analysis. Deflection of the shaft, both linear and angular, should be checked at gears and bearings. Allowable deflections will depend on many factors, and bearing and gear catalogs should be used for guidance on allowable misalignment for specific bearings and gears. As a rough guideline, typical ranges for maximum slopes and transverse deflections of the shaft centerline are given in Table 7-2. The allowable transverse deflections for spur gears are dependent on the size of the teeth, as represented by the diametral pitch $P =$ number of teeth/pitch diameter.

In Sec. 4-4 several beam deflection methods are described. For shafts, where the deflections may be sought at a number of different points, integration using either singularity functions or numerical integration is practical. In a stepped shaft, the cross-sectional properties change along the shaft at each step, increasing the complexity of integration, since both M and I vary. Fortunately, only the gross geometric dimensions need to be included, as the local factors such as fillets, grooves, and keyways do not have much impact on deflection. Example 4-7 demonstrates the use of singularity functions for a stepped shaft. Many shafts will include forces in multiple planes, requiring either a three dimensional analysis, or the use of superposition to obtain deflections in two planes which can then be summed as vectors.

A deflection analysis is straightforward, but it is lengthy and tedious to carry out manually, particularly for multiple points of interest. Consequently, practically all shaft deflection analysis will be evaluated with the assistance of software. Any general-purpose finite-element software can readily handle a shaft problem (see Chap. 19). This is practical if the designer is already familiar with using the software and with how to properly model the shaft. Special-purpose software solutions for 3-D shaft analysis are available, but somewhat expensive if only used occasionally. Software requiring very little training is readily available for planar beam analysis, and can be downloaded from the internet. Example 7-3 demonstrates how to incorporate such a program for a shaft with forces in multiple planes.

EXAMPLE 7-3

This example problem is part of a larger case study. See Chap. 18 for the full context.

In Example 7-2 a preliminary shaft geometry was obtained on the basis of design for stress. The resulting shaft is shown in Fig. 7-10, with proposed diameters of

$$D_1 = D_7 = 1 \text{ in}$$

$$D_2 = D_6 = 1.4 \text{ in}$$

$$D_3 = D_5 = 1.625 \text{ in}$$

$$D_4 = 2.0 \text{ in}$$

Check that the deflections and slopes at the gears and bearings are acceptable. If necessary, propose changes in the geometry to resolve any problems.

Solution

A simple planar beam analysis program will be used. By modeling the shaft twice, with loads in two orthogonal planes, and combining the results, the shaft deflections can readily be obtained. For both planes, the material is selected (steel with $E = 30$ Mpsi), the shaft lengths and diameters are entered, and the bearing locations are specified. Local details like grooves and keyways are ignored, as they will have insignificant effect on the deflections. Then the tangential gear forces are entered in the horizontal xz plane model, and the radial gear forces are entered in the vertical xy plane model. The software can calculate the bearing reaction forces, and numerically integrate to generate plots for shear, moment, slope, and deflection, as shown in Fig. 7-11.

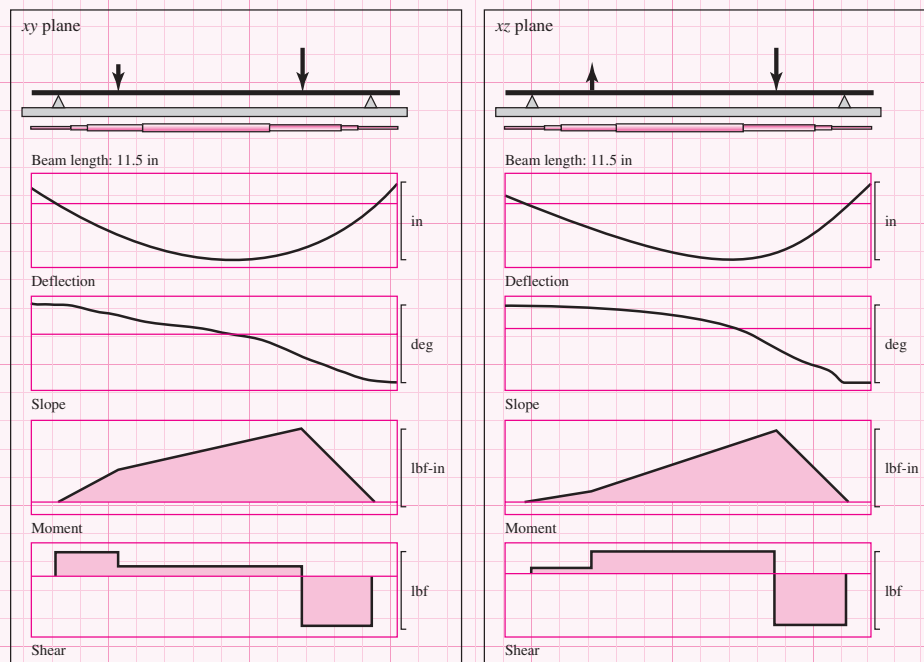


Figure 7-11

Shear, moment, slope, and deflection plots from two planes. (Source: *Beam 2D Stress Analysis*, Orand Systems, Inc.)

Point of interest	xz plane	xy plane	Total
Left bearing slope	0.02263 deg	0.01770 deg	0.02872 deg 0.000501 rad
Right bearing slope	0.05711 deg	0.02599 deg	0.06274 deg 0.001095 rad
Left gear slope	0.02067 deg	0.01162 deg	0.02371 deg 0.000414 rad
Right gear slope	0.02155 deg	0.01149 deg	0.02442 deg 0.000426 rad
Left gear deflection	0.0007568 in	0.0005153 in	0.0009155 in
Right gear deflection	0.0015870 in	0.0007535 in	0.0017567 in

Table 7-3

Slope and Deflection Values at Key Locations

The deflections and slopes at points of interest are obtained from the plots, and combined with orthogonal vector addition, that is, $\delta = \sqrt{\delta_{xz}^2 + \delta_{xy}^2}$. Results are shown in Table 7-3.

Whether these values are acceptable will depend on the specific bearings and gears selected, as well as the level of performance expected. According to the guidelines in Table 7-2, all of the bearing slopes are well below typical limits for ball bearings. The right bearing slope is within the typical range for cylindrical bearings. Since the load on the right bearing is relatively high, a cylindrical bearing might be used. This constraint should be checked against the specific bearing specifications once the bearing is selected.

The gear slopes and deflections more than satisfy the limits recommended in Table 7-2. It is recommended to proceed with the design, with an awareness that changes that reduce rigidity should warrant another deflection check.

Once deflections at various points have been determined, if any value is larger than the allowable deflection at that point, a new diameter can be found from

$$d_{\text{new}} = d_{\text{old}} \left| \frac{n_d y_{\text{old}}}{y_{\text{all}}} \right|^{1/4} \quad (7-17)$$

where y_{all} is the allowable deflection at that station and n_d is the design factor. Similarly, if any slope is larger than the allowable slope θ_{all} , a new diameter can be found from

$$d_{\text{new}} = d_{\text{old}} \left| \frac{n_d (dy/dx)_{\text{old}}}{(\text{slope})_{\text{all}}} \right|^{1/4} \quad (7-18)$$

where $(\text{slope})_{\text{all}}$ is the allowable slope. As a result of these calculations, determine the largest $d_{\text{new}}/d_{\text{old}}$ ratio, then multiply all diameters by this ratio. The tight constraint will be just tight, and all others will be loose. Don't be too concerned about end journal sizes, as their influence is usually negligible. The beauty of the method is that the deflections need to be completed just once and constraints can be rendered loose but for one, with diameters all identified without reworking every deflection.

EXAMPLE 7-4

For the shaft in Example 7-3, it was noted that the slope at the right bearing is near the limit for a cylindrical roller bearing. Determine an appropriate increase in diameters to bring this slope down to 0.0005 rad.

Solution

Applying Eq. (7-17) to the deflection at the right bearing gives

$$d_{\text{new}} = d_{\text{old}} \left| \frac{n_d \text{slope}_{\text{old}}}{\text{slope}_{\text{all}}} \right|^{1/4} = 1.0 \left| \frac{(1)(0.001095)}{(0.0005)} \right|^{1/4} = 1.216 \text{ in}$$

Multiplying all diameters by the ratio

$$\frac{d_{\text{new}}}{d_{\text{old}}} = \frac{1.216}{1.0} = 1.216$$

gives a new set of diameters,

$$D_1 = D_7 = 1.216 \text{ in}$$

$$D_2 = D_6 = 1.702 \text{ in}$$

$$D_3 = D_5 = 1.976 \text{ in}$$

$$D_4 = 2.432 \text{ in}$$

Repeating the beam deflection analysis of Example 7-3 with these new diameters produces a slope at the right bearing of 0.0005 in, with all other deflections less than their previous values.

The transverse shear V at a section of a beam in flexure imposes a shearing deflection, which is superposed on the bending deflection. Usually such shearing deflection is less than 1 percent of the transverse bending deflection, and it is seldom evaluated. However, when the shaft length-to-diameter ratio is less than 10, the shear component of transverse deflection merits attention. There are many short shafts. A tabular method is explained in detail elsewhere², including examples.

For right-circular cylindrical shafts in torsion the angular deflection θ is given in Eq. (4-5). For a stepped shaft with individual cylinder length l_i and torque T_i , the angular deflection can be estimated from

$$\theta = \sum \theta_i = \sum \frac{T_i l_i}{G_i J_i} \quad (7-19)$$

or, for a constant torque throughout homogeneous material, from

$$\theta = \frac{T}{G} \sum \frac{l_i}{J_i} \quad (7-20)$$

This should be treated only as an estimate, since experimental evidence shows that the actual θ is larger than given by Eqs. (7-19) and (7-20).³

²C.R. Mischke, "Tabular Method for Transverse Shear Deflection," Sec. 17.3 in Joseph E. Shigley, Charles R. Mischke, and Thomas H. Brown, Jr. (eds.), *Standard Handbook of Machine Design*, 3rd ed., McGraw-Hill, New York, 2004.

³R. Bruce Hopkins, *Design Analysis of Shafts and Beams*, McGraw-Hill, New York, 1970, pp. 93-99.

If torsional stiffness is defined as $k_i = T_i/\theta_i$ and, since $\theta_i = T_i/k_i$ and $\theta = \sum \theta_i = \sum (T_i/k_i)$, for constant torque $\theta = T \sum (1/k_i)$, it follows that the torsional stiffness of the shaft k in terms of segment stiffnesses is

$$\frac{1}{k} = \sum \frac{1}{k_i} \quad (7-21)$$

7-6 Critical Speeds for Shafts

When a shaft is turning, eccentricity causes a centrifugal force deflection, which is resisted by the shaft's flexural rigidity EI . As long as deflections are small, no harm is done. Another potential problem, however, is called *critical speeds*: at certain speeds the shaft is unstable, with deflections increasing without upper bound. It is fortunate that although the dynamic deflection shape is unknown, using a static deflection curve gives an excellent estimate of the lowest critical speed. Such a curve meets the boundary condition of the differential equation (zero moment and deflection at both bearings) and the shaft energy is not particularly sensitive to the exact shape of the deflection curve. Designers seek first critical speeds at least twice the operating speed.

The shaft, because of its own mass, has a critical speed. The ensemble of attachments to a shaft likewise has a critical speed that is much lower than the shaft's intrinsic critical speed. Estimating these critical speeds (and harmonics) is a task of the designer. When geometry is simple, as in a shaft of uniform diameter, simply supported, the task is easy. It can be expressed⁴ as

$$\omega_1 = \left(\frac{\pi}{l}\right)^2 \sqrt{\frac{EI}{m}} = \left(\frac{\pi}{l}\right)^2 \sqrt{\frac{gEI}{A\gamma}} \quad (7-22)$$

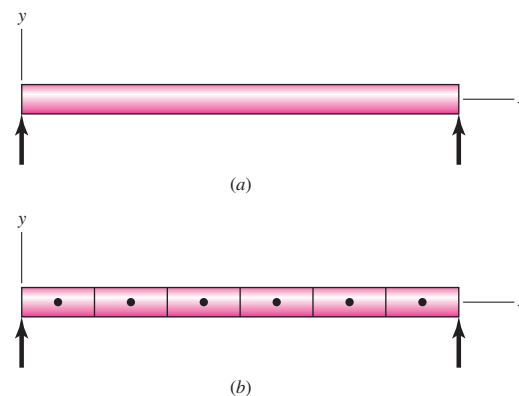
where m is the mass per unit length, A the cross-sectional area, and γ the specific weight. For an ensemble of attachments, Rayleigh's method for lumped masses gives⁵

$$\omega_1 = \sqrt{\frac{g \sum w_i y_i}{\sum w_i y_i^2}} \quad (7-23)$$

where w_i is the weight of the i th location and y_i is the deflection at the i th body location. It is possible to use Eq. (7-23) for the case of Eq. (7-22) by partitioning the shaft into segments and placing its weight force at the segment centroid as seen in Fig. 7-12.

Figure 7-12

(a) A uniform-diameter shaft for Eq. (7-22). (b) A segmented uniform-diameter shaft for Eq. (7-23).

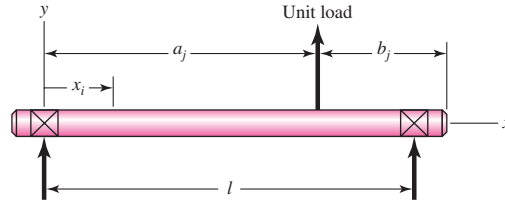


⁴William T. Thomson and Marie Dillon Dahleh, *Theory of Vibration with Applications*, Prentice Hall, 5th ed., 1998, p. 273.

⁵Thomson, op. cit., p. 357.

Figure 7-13

The influence coefficient δ_{ij} is the deflection at i due to a unit load at j .



Computer assistance is often used to lessen the difficulty in finding transverse deflections of a stepped shaft. Rayleigh's equation overestimates the critical speed.

To counter the increasing complexity of detail, we adopt a useful viewpoint. Inasmuch as the shaft is an elastic body, we can use *influence coefficients*. An influence coefficient is the transverse deflection at location i on a shaft due to a unit load at location j on the shaft. From Table A-9-6 we obtain, for a simply supported beam with a single unit load as shown in Fig. 7-13,

$$\delta_{ij} = \begin{cases} \frac{b_j x_i}{6EI} (l^2 - b_j^2 - x_i^2) & x_i \leq a_j \\ \frac{a_j (l - x_i)}{6EI} (2lx_i - a_j^2 - x_i^2) & x_i > a_j \end{cases} \quad (7-24)$$

For three loads the influence coefficients may be displayed as

	<i>i</i>		
<i>i</i>	1	2	3
1	δ_{11}	δ_{12}	δ_{13}
2	δ_{21}	δ_{22}	δ_{23}
3	δ_{31}	δ_{32}	δ_{33}

Maxwell's reciprocity theorem⁶ states that there is a symmetry about the main diagonal, composed of δ_{11} , δ_{22} , and δ_{33} , of the form $\delta_{ij} = \delta_{ji}$. This relation reduces the work of finding the influence coefficients. From the influence coefficients above, one can find the deflections y_1 , y_2 , and y_3 of Eq. (7-23) as follows:

$$\begin{aligned} y_1 &= F_1 \delta_{11} + F_2 \delta_{12} + F_3 \delta_{13} \\ y_2 &= F_1 \delta_{21} + F_2 \delta_{22} + F_3 \delta_{23} \\ y_3 &= F_1 \delta_{31} + F_2 \delta_{32} + F_3 \delta_{33} \end{aligned} \quad (7-25)$$

The forces F_i can arise from weight attached w_i or centrifugal forces $m_i \omega^2 y_i$. The equation set (7-25) written with inertial forces can be displayed as

$$\begin{aligned} y_1 &= m_1 \omega^2 y_1 \delta_{11} + m_2 \omega^2 y_2 \delta_{12} + m_3 \omega^2 y_3 \delta_{13} \\ y_2 &= m_1 \omega^2 y_1 \delta_{21} + m_2 \omega^2 y_2 \delta_{22} + m_3 \omega^2 y_3 \delta_{23} \\ y_3 &= m_1 \omega^2 y_1 \delta_{31} + m_2 \omega^2 y_2 \delta_{32} + m_3 \omega^2 y_3 \delta_{33} \end{aligned}$$

⁶Thomson, op. cit., p. 167.

which can be rewritten as

$$\begin{aligned} (m_1\delta_{11} - 1/\omega^2)y_1 + (m_2\delta_{12})y_2 + (m_3\delta_{13})y_3 &= 0 \\ (m_1\delta_{21})y_1 + (m_2\delta_{22} - 1/\omega^2)y_2 + (m_3\delta_{23})y_3 &= 0 \\ (m_1\delta_{31})y_1 + (m_2\delta_{32})y_2 + (m_3\delta_{33} - 1/\omega^2)y_3 &= 0 \end{aligned} \quad (a)$$

Equation set (a) is three simultaneous equations in terms of y_1 , y_2 , and y_3 . To avoid the trivial solution $y_1 = y_2 = y_3 = 0$, the determinant of the coefficients of y_1 , y_2 , and y_3 must be zero (eigenvalue problem). Thus,

$$\begin{vmatrix} (m_1\delta_{11} - 1/\omega^2) & m_2\delta_{12} & m_3\delta_{13} \\ m_1\delta_{21} & (m_2\delta_{22} - 1/\omega^2) & m_3\delta_{23} \\ m_1\delta_{31} & m_2\delta_{32} & (m_3\delta_{33} - 1/\omega^2) \end{vmatrix} = 0 \quad (7-26)$$

which says that a deflection other than zero exists only at three distinct values of ω , the critical speeds. Expanding the determinant, we obtain

$$\left(\frac{1}{\omega^2}\right)^3 - (m_1\delta_{11} + m_2\delta_{22} + m_3\delta_{33})\left(\frac{1}{\omega^2}\right)^2 + \dots = 0 \quad (7-27)$$

The three roots of Eq. (7-27) can be expressed as $1/\omega_1^2$, $1/\omega_2^2$, and $1/\omega_3^2$. Thus Eq. (7-27) can be written in the form

$$\left(\frac{1}{\omega^2} - \frac{1}{\omega_1^2}\right)\left(\frac{1}{\omega^2} - \frac{1}{\omega_2^2}\right)\left(\frac{1}{\omega^2} - \frac{1}{\omega_3^2}\right) = 0$$

or

$$\left(\frac{1}{\omega^2}\right)^3 - \left(\frac{1}{\omega_1^2} + \frac{1}{\omega_2^2} + \frac{1}{\omega_3^2}\right)\left(\frac{1}{\omega^2}\right)^2 + \dots = 0 \quad (7-28)$$

Comparing Eqs. (7-27) and (7-28) we see that

$$\frac{1}{\omega_1^2} + \frac{1}{\omega_2^2} + \frac{1}{\omega_3^2} = m_1\delta_{11} + m_2\delta_{22} + m_3\delta_{33} \quad (7-29)$$

If we had only a single mass m_1 alone, the critical speed would be given by $1/\omega^2 = m_1\delta_{11}$. Denote this critical speed as ω_{11} (which considers only m_1 acting alone). Likewise for m_2 or m_3 acting alone, we similarly define the terms $1/\omega_{22}^2 = m_2\delta_{22}$ or $1/\omega_{33}^2 = m_3\delta_{33}$, respectively. Thus, Eq. (7-29) can be rewritten as

$$\frac{1}{\omega_1^2} + \frac{1}{\omega_2^2} + \frac{1}{\omega_3^2} = \frac{1}{\omega_{11}^2} + \frac{1}{\omega_{22}^2} + \frac{1}{\omega_{33}^2} \quad (7-30)$$

If we order the critical speeds such that $\omega_1 < \omega_2 < \omega_3$, then $1/\omega_1^2 \gg 1/\omega_2^2$, and $1/\omega_1^2 \gg 1/\omega_3^2$. So the first, or fundamental, critical speed ω_1 can be approximated by

$$\frac{1}{\omega_1^2} \doteq \frac{1}{\omega_{11}^2} + \frac{1}{\omega_{22}^2} + \frac{1}{\omega_{33}^2} \quad (7-31)$$

This idea can be extended to an n -body shaft:

$$\frac{1}{\omega_1^2} \doteq \sum_{i=1}^n \frac{1}{\omega_{ii}^2} \quad (7-32)$$

This is called *Dunkerley's equation*. By ignoring the higher mode term(s), the first critical speed estimate is *lower* than actually is the case.

Since Eq. (7–32) has no loads appearing in the equation, it follows that if each load could be placed at some convenient location transformed into an equivalent load, then the critical speed of an array of loads could be found by summing the equivalent loads, all placed at a single convenient location. For the load at station 1, placed at the center of span, denoted with the subscript *c*, the equivalent load is found from

$$\omega_{11}^2 = \frac{g}{w_1 \delta_{11}} = \frac{g}{w_{1c} \delta_{cc}}$$

or

$$w_{1c} = w_1 \frac{\delta_{11}}{\delta_{cc}} \tag{7-33}$$

EXAMPLE 7-5

Consider a simply supported steel shaft as depicted in Fig. 7–14, with 1 in diameter and a 31-in span between bearings, carrying two gears weighing 35 and 55 lbf.

- (a) Find the influence coefficients.
- (b) Find $\sum wy$ and $\sum wy^2$ and the first critical speed using Rayleigh's equation, Eq. (7–23).
- (c) From the influence coefficients, find ω_{11} and ω_{22} .
- (d) Using Dunkerley's equation, Eq. (7–32), estimate the first critical speed.
- (e) Use superposition to estimate the first critical speed.
- (f) Estimate the shaft's intrinsic critical speed. Suggest a modification to Dunkerley's equation to include the effect of the shaft's mass on the first critical speed of the attachments.

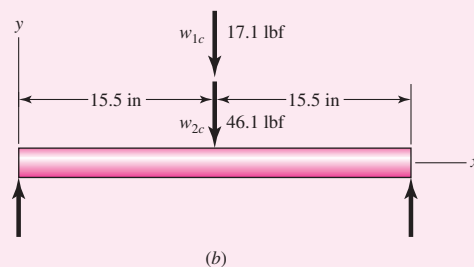
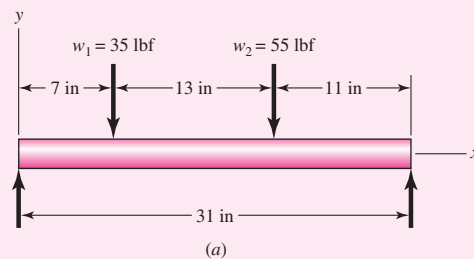
Solution

(a)
$$I = \frac{\pi d^4}{64} = \frac{\pi (1)^4}{64} = 0.049\ 09\ \text{in}^4$$

$$6EI l = 6(30)10^6(0.049\ 09)31 = 0.2739(10^9)\ \text{lbf} \cdot \text{in}^3$$

Figure 7-14

- (a) A 1-in uniform-diameter shaft for Ex. 7–5.
- (b) Superposing of equivalent loads at the center of the shaft for the purpose of finding the first critical speed.



From Eq. set (7–24),

$$\delta_{11} = \frac{24(7)(31^2 - 24^2 - 7^2)}{0.2739(10^9)} = 2.061(10^{-4}) \text{ in/lbf}$$

$$\delta_{22} = \frac{11(20)(31^2 - 11^2 - 20^2)}{0.2739(10^9)} = 3.534(10^{-4}) \text{ in/lbf}$$

$$\delta_{12} = \delta_{21} = \frac{11(7)(31^2 - 11^2 - 7^2)}{0.2739(10^9)} = 2.224(10^{-4}) \text{ in/lbf}$$

Answer

	<i>i</i>	
<i>i</i>	1	2
1	2.061(10 ⁻⁴)	2.224(10 ⁻⁴)
2	2.224(10 ⁻⁴)	3.534(10 ⁻⁴)

$$y_1 = w_1\delta_{11} + w_2\delta_{12} = 35(2.061)10^{-4} + 55(2.224)10^{-4} = 0.01945 \text{ in}$$

$$y_2 = w_1\delta_{21} + w_2\delta_{22} = 35(2.224)10^{-4} + 55(3.534)10^{-4} = 0.02722 \text{ in}$$

$$(b) \quad \sum w_i y_i = 35(0.01945) + 55(0.02722) = 2.178 \text{ lbf} \cdot \text{in}$$

Answer

$$\sum w_i y_i^2 = 35(0.01945)^2 + 55(0.02722)^2 = 0.05399 \text{ lbf} \cdot \text{in}^2$$

Answer

$$\omega = \sqrt{\frac{386.1(2.178)}{0.05399}} = 124.8 \text{ rad/s, or } 1192 \text{ rev/min}$$

(c)

Answer

$$\frac{1}{\omega_{11}^2} = \frac{w_1}{g} \delta_{11}$$

$$\omega_{11} = \sqrt{\frac{g}{w_1 \delta_{11}}} = \sqrt{\frac{386.1}{35(2.061)10^{-4}}} = 231.4 \text{ rad/s, or } 2210 \text{ rev/min}$$

Answer

$$\omega_{22} = \sqrt{\frac{g}{w_2 \delta_{22}}} = \sqrt{\frac{386.1}{55(3.534)10^{-4}}} = 140.9 \text{ rad/s, or } 1346 \text{ rev/min}$$

$$(d) \quad \frac{1}{\omega_1^2} \doteq \sum \frac{1}{\omega_{ii}^2} = \frac{1}{231.4^2} + \frac{1}{140.9^2} = 6.905(10^{-5}) \quad (1)$$

Answer

$$\omega_1 \doteq \sqrt{\frac{1}{6.905(10^{-5})}} = 120.3 \text{ rad/s, or } 1149 \text{ rev/min}$$

which is less than part *b*, as expected.

(e) From Eq. (7–24),

$$\begin{aligned} \delta_{cc} &= \frac{b_{cc}x_{cc}(l^2 - b_{cc}^2 - x_{cc}^2)}{6EI} = \frac{15.5(15.5)(31^2 - 15.5^2 - 15.5^2)}{0.2739(10^9)} \\ &= 4.215(10^{-4}) \text{ in/lbf} \end{aligned}$$

From Eq. (7–33),

$$w_{1c} = w_1 \frac{\delta_{11}}{\delta_{cc}} = 35 \frac{2.061(10^{-4})}{4.215(10^{-4})} = 17.11 \text{ lbf}$$

$$w_{2c} = w_2 \frac{\delta_{22}}{\delta_{cc}} = 55 \frac{3.534(10^{-4})}{4.215(10^{-4})} = 46.11 \text{ lbf}$$

Answer
$$\omega = \sqrt{\frac{g}{\delta_{cc} \sum w_{ic}}} = \sqrt{\frac{386.1}{4.215(10^{-4})(17.11 + 46.11)}} = 120.4 \text{ rad/s, or } 1150 \text{ rev/min}$$

which, except for rounding, agrees with part *d*, as expected.

(*f*) For the shaft, $E = 30(10^6)$ psi, $\gamma = 0.282$ lbf/in³, and $A = \pi(l^2)/4 = 0.7854$ in². Considering the shaft alone, the critical speed, from Eq. (7–22), is

Answer
$$\omega_s = \left(\frac{\pi}{l}\right)^2 \sqrt{\frac{gEI}{A\gamma}} = \left(\frac{\pi}{31}\right)^2 \sqrt{\frac{386.1(30)10^6(0.04909)}{0.7854(0.282)}}$$

$$= 520.4 \text{ rad/s, or } 4970 \text{ rev/min}$$

We can simply add $1/\omega_s^2$ to the right side of Dunkerley's equation, Eq. (1), to include the shaft's contribution,

Answer
$$\frac{1}{\omega_1^2} \doteq \frac{1}{520.4^2} + 6.905(10^{-5}) = 7.274(10^{-5})$$

$$\omega_1 \doteq 117.3 \text{ rad/s, or } 1120 \text{ rev/min}$$

which is slightly less than part *d*, as expected.

The shaft's first critical speed ω_s is just one more single effect to add to Dunkerley's equation. Since it does not fit into the summation, it is usually written up front.

Answer
$$\frac{1}{\omega_1^2} \doteq \frac{1}{\omega_s^2} + \sum_{i=1}^n \frac{1}{\omega_{ii}^2} \quad (7-34)$$

Common shafts are complicated by the stepped-cylinder geometry, which makes the influence-coefficient determination part of a numerical solution.

7–7 Miscellaneous Shaft Components

Setscrews

Unlike bolts and cap screws, which depend on tension to develop a clamping force, the setscrew depends on compression to develop the clamping force. The resistance to axial motion of the collar or hub relative to the shaft is called *holding power*. This holding power, which is really a force resistance, is due to frictional resistance of the contacting portions of the collar and shaft as well as any slight penetration of the setscrew into the shaft.

Figure 7–15 shows the point types available with socket setscrews. These are also manufactured with screwdriver slots and with square heads.

Table 7–4 lists values of the seating torque and the corresponding holding power for inch-series setscrews. The values listed apply to both axial holding power, for

Figure 7-15

Socket setscrews: (a) flat point;
(b) cup point; (c) oval point;
(d) cone point; (e) half-dog
point.

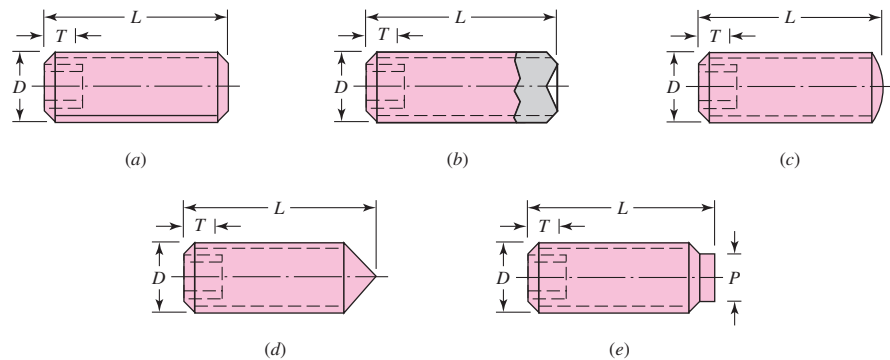


Table 7-4

Typical Holding Power
(Force) for Socket
Setscrews*

Source: Unbrako Division, SPS
Technologies, Jenkintown, Pa.

Size, in	Seating Torque, lbf · in	Holding Power, lbf
#0	1.0	50
#1	1.8	65
#2	1.8	85
#3	5	120
#4	5	160
#5	10	200
#6	10	250
#8	20	385
#10	36	540
$\frac{1}{4}$	87	1000
$\frac{5}{16}$	165	1500
$\frac{3}{8}$	290	2000
$\frac{7}{16}$	430	2500
$\frac{1}{2}$	620	3000
$\frac{9}{16}$	620	3500
$\frac{5}{8}$	1325	4000
$\frac{3}{4}$	2400	5000
$\frac{7}{8}$	5200	6000
1	7200	7000

*Based on alloy-steel screw against steel shaft, class 3A coarse or fine threads in class 2B holes, and cup-point socket setscrews.

resisting thrust, and the tangential holding power, for resisting torsion. Typical factors of safety are 1.5 to 2.0 for static loads and 4 to 8 for various dynamic loads.

Setscrews should have a length of about half of the shaft diameter. Note that this practice also provides a rough rule for the radial thickness of a hub or collar.

Keys and Pins

Keys and pins are used on shafts to secure rotating elements, such as gears, pulleys, or other wheels. Keys are used to enable the transmission of torque from the shaft to the shaft-supported element. Pins are used for axial positioning and for the transfer of torque or thrust or both.

Figure 7–16 shows a variety of keys and pins. Pins are useful when the principal loading is shear and when both torsion and thrust are present. Taper pins are sized according to the diameter at the large end. Some of the most useful sizes of these are listed in Table 7–5. The diameter at the small end is

$$d = D - 0.0208L \tag{7-35}$$

where d = diameter at small end, in
 D = diameter at large end, in
 L = length, in

Figure 7-16

(a) Square key; (b) round key; (c and d) round pins; (e) taper pin; (f) split tubular spring pin. The pins in parts (e) and (f) are shown longer than necessary, to illustrate the chamfer on the ends, but their lengths should be kept smaller than the hub diameters to prevent injuries due to projections on rotating parts.

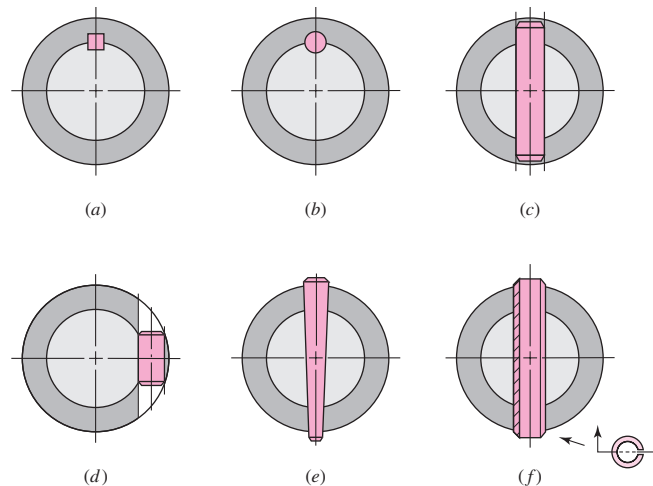


Table 7-5

Dimensions at Large End
of Some Standard Taper
Pins—Inch Series

Size	Commercial		Precision	
	Maximum	Minimum	Maximum	Minimum
4/0	0.1103	0.1083	0.1100	0.1090
2/0	0.1423	0.1403	0.1420	0.1410
0	0.1573	0.1553	0.1570	0.1560
2	0.1943	0.1923	0.1940	0.1930
4	0.2513	0.2493	0.2510	0.2500
6	0.3423	0.3403	0.3420	0.3410
8	0.4933	0.4913	0.4930	0.4920

Table 7–6

Inch Dimensions for
Some Standard Square-
and Rectangular-Key
Applications

Source: Joseph E. Shigley,
"Unthreaded Fasteners,"
Chap. 24 in Joseph E.
Shigley, Charles R. Mischke,
and Thomas H. Brown, Jr.
(eds.), *Standard Handbook of
Machine Design*, 3rd ed.,
McGraw-Hill, New York,
2004.

Shaft Diameter		Key Size		Keyway Depth
Over	To (Incl.)	w	h	
$\frac{5}{16}$	$\frac{7}{16}$	$\frac{3}{32}$	$\frac{3}{32}$	$\frac{3}{64}$
$\frac{7}{16}$	$\frac{9}{16}$	$\frac{1}{8}$	$\frac{3}{32}$	$\frac{3}{64}$
		$\frac{1}{8}$	$\frac{1}{8}$	$\frac{1}{16}$
$\frac{9}{16}$	$\frac{7}{8}$	$\frac{3}{16}$	$\frac{1}{8}$	$\frac{1}{16}$
		$\frac{3}{16}$	$\frac{3}{16}$	$\frac{3}{32}$
$\frac{7}{8}$	$1\frac{1}{4}$	$\frac{1}{4}$	$\frac{3}{16}$	$\frac{3}{32}$
		$\frac{1}{4}$	$\frac{1}{4}$	$\frac{1}{8}$
$1\frac{1}{4}$	$1\frac{3}{8}$	$\frac{5}{16}$	$\frac{1}{4}$	$\frac{1}{8}$
		$\frac{5}{16}$	$\frac{5}{16}$	$\frac{5}{32}$
$1\frac{3}{8}$	$1\frac{3}{4}$	$\frac{3}{8}$	$\frac{1}{4}$	$\frac{1}{8}$
		$\frac{3}{8}$	$\frac{3}{8}$	$\frac{3}{16}$
$1\frac{3}{4}$	$2\frac{1}{4}$	$\frac{1}{2}$	$\frac{3}{8}$	$\frac{3}{16}$
		$\frac{1}{2}$	$\frac{1}{2}$	$\frac{1}{4}$
$2\frac{1}{4}$	$2\frac{3}{4}$	$\frac{5}{8}$	$\frac{7}{16}$	$\frac{7}{32}$
		$\frac{5}{8}$	$\frac{5}{8}$	$\frac{5}{16}$
$2\frac{3}{4}$	$3\frac{1}{4}$	$\frac{3}{4}$	$\frac{1}{2}$	$\frac{1}{4}$
		$\frac{3}{4}$	$\frac{3}{4}$	$\frac{3}{8}$

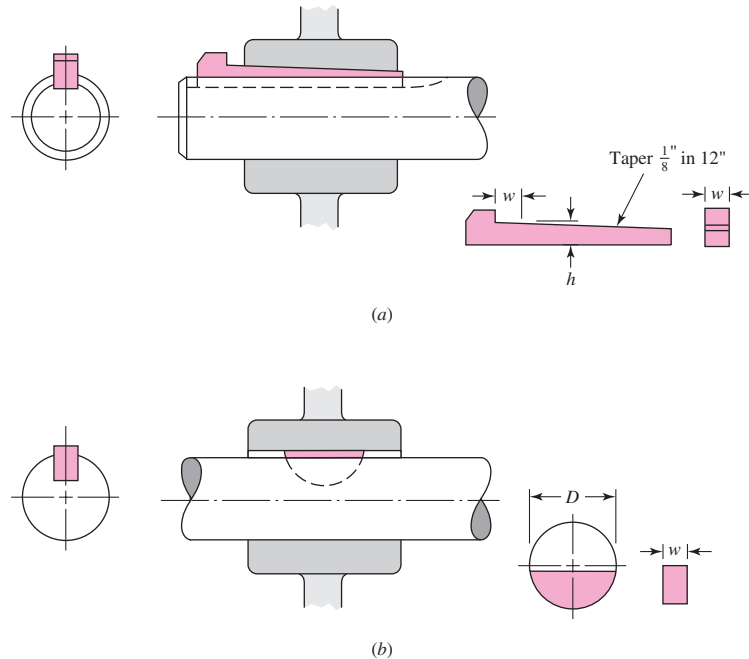
For less important applications, a dowel pin or a drive pin can be used. A large variety of these are listed in manufacturers' catalogs.⁷

The square key, shown in Fig. 7–16a, is also available in rectangular sizes. Standard sizes of these, together with the range of applicable shaft diameters, are listed in Table 7–6. The shaft diameter determines standard sizes for width, height, and key depth. The designer chooses an appropriate key length to carry the torsional load. Failure of the key can be by direct shear, or by bearing stress. Example 7–6 demonstrates the process to size the length of a key. The maximum length of a key is limited by the hub length of the attached element, and should generally not exceed about 1.5 times the shaft diameter to avoid excessive twisting with the angular deflection of the shaft. Multiple keys may be used as necessary to carry greater loads, typically oriented at 90° from one another. Excessive safety factors should be avoided in key design, since it is desirable in an overload situation for the key to fail, rather than more costly components.

Stock key material is typically made from low carbon cold-rolled steel, and is manufactured such that its dimensions never exceed the nominal dimension. This allows standard cutter sizes to be used for the keyseats. A setscrew is sometimes used along with a key to hold the hub axially, and to minimize rotational backlash when the shaft rotates in both directions.

⁷See also Joseph E. Shigley, "Unthreaded Fasteners," Chap. 24. In Joseph E. Shigley, Charles R. Mischke, and Thomas H. Brown, Jr. (eds.), *Standard Handbook of Machine Design*, 3rd ed., McGraw-Hill, New York, 2004.

Figure 7-17

 (a) Gib-head key;
 (b) Woodruff key.


The gib-head key, in Fig. 7-17a, is tapered so that, when firmly driven, it acts to prevent relative axial motion. This also gives the advantage that the hub position can be adjusted for the best axial location. The head makes removal possible without access to the other end, but the projection may be hazardous.

The Woodruff key, shown in Fig. 7-17b, is of general usefulness, especially when a wheel is to be positioned against a shaft shoulder, since the keyseat need not be machined into the shoulder stress-concentration region. The use of the Woodruff key also yields better concentricity after assembly of the wheel and shaft. This is especially important at high speeds, as, for example, with a turbine wheel and shaft. Woodruff keys are particularly useful in smaller shafts where their deeper penetration helps prevent key rolling. Dimensions for some standard Woodruff key sizes can be found in Table 7-7, and Table 7-8 gives the shaft diameters for which the different keyseat widths are suitable.

Pilkey⁸ gives values for stress concentrations in an end-milled keyseat, as a function of the ratio of the radius r at the bottom of the groove and the shaft diameter d . For fillets cut by standard milling-machine cutters, with a ratio of $r/d = 0.02$, Peterson's charts give $K_t = 2.14$ for bending and $K_{ts} = 2.62$ for torsion without the key in place, or $K_{ts} = 3.0$ for torsion with the key in place. The stress concentration at the end of the keyseat can be reduced somewhat by using a sled-runner keyseat, eliminating the abrupt end to the keyseat, as shown in Fig. 7-17. It does, however, still have the sharp radius in the bottom of the groove on the sides. The sled-runner keyseat can only be used when definite longitudinal key positioning is not necessary. It is also not as suitable near a shoulder. Keeping the end of a keyseat at least a distance

⁸W. D. Pilkey, *Peterson's Stress Concentration Factors*, 2nd ed., John Wiley & Sons, New York, 1997, pp. 408–409.

Table 7-7

Dimensions of Woodruff
Keys—Inch Series

Key Size		Height b	Offset e	Keyseat Depth	
w	D			Shaft	Hub
$\frac{1}{16}$	$\frac{1}{4}$	0.109	$\frac{1}{64}$	0.0728	0.0372
$\frac{1}{16}$	$\frac{3}{8}$	0.172	$\frac{1}{64}$	0.1358	0.0372
$\frac{3}{32}$	$\frac{3}{8}$	0.172	$\frac{1}{64}$	0.1202	0.0529
$\frac{3}{32}$	$\frac{1}{2}$	0.203	$\frac{3}{64}$	0.1511	0.0529
$\frac{3}{32}$	$\frac{5}{8}$	0.250	$\frac{1}{16}$	0.1981	0.0529
$\frac{1}{8}$	$\frac{1}{2}$	0.203	$\frac{3}{64}$	0.1355	0.0685
$\frac{1}{8}$	$\frac{5}{8}$	0.250	$\frac{1}{16}$	0.1825	0.0685
$\frac{1}{8}$	$\frac{3}{4}$	0.313	$\frac{1}{16}$	0.2455	0.0685
$\frac{5}{32}$	$\frac{5}{8}$	0.250	$\frac{1}{16}$	0.1669	0.0841
$\frac{5}{32}$	$\frac{3}{4}$	0.313	$\frac{1}{16}$	0.2299	0.0841
$\frac{5}{32}$	$\frac{7}{8}$	0.375	$\frac{1}{16}$	0.2919	0.0841
$\frac{3}{16}$	$\frac{3}{4}$	0.313	$\frac{1}{16}$	0.2143	0.0997
$\frac{3}{16}$	$\frac{7}{8}$	0.375	$\frac{1}{16}$	0.2763	0.0997
$\frac{3}{16}$	1	0.438	$\frac{1}{16}$	0.3393	0.0997
$\frac{1}{4}$	$\frac{7}{8}$	0.375	$\frac{1}{16}$	0.2450	0.1310
$\frac{1}{4}$	1	0.438	$\frac{1}{16}$	0.3080	0.1310
$\frac{1}{4}$	$1\frac{1}{4}$	0.547	$\frac{5}{64}$	0.4170	0.1310
$\frac{5}{16}$	1	0.438	$\frac{1}{16}$	0.2768	0.1622
$\frac{5}{16}$	$1\frac{1}{4}$	0.547	$\frac{5}{64}$	0.3858	0.1622
$\frac{5}{16}$	$1\frac{1}{2}$	0.641	$\frac{7}{64}$	0.4798	0.1622
$\frac{3}{8}$	$1\frac{1}{4}$	0.547	$\frac{5}{64}$	0.3545	0.1935
$\frac{3}{8}$	$1\frac{1}{2}$	0.641	$\frac{7}{64}$	0.4485	0.1935

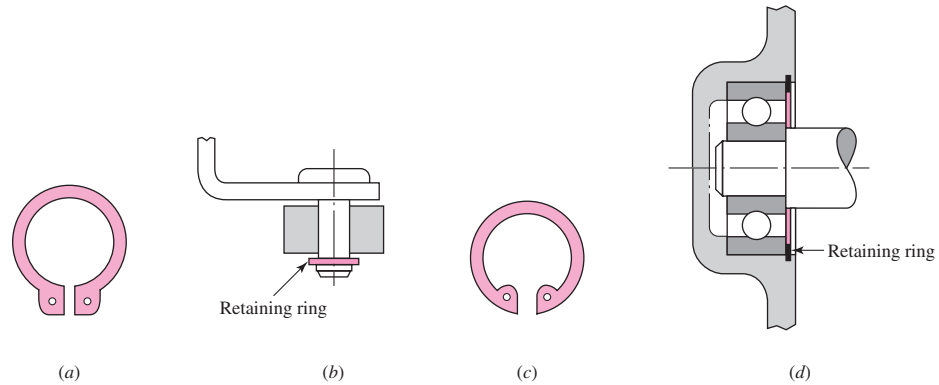
Table 7-8

Sizes of Woodruff Keys
Suitable for Various
Shaft Diameters

Keyseat Width, in	Shaft Diameter, in	
	From	To (inclusive)
$\frac{1}{16}$	$\frac{5}{16}$	$\frac{1}{2}$
$\frac{3}{32}$	$\frac{3}{8}$	$\frac{7}{8}$
$\frac{1}{8}$	$\frac{3}{8}$	$1\frac{1}{2}$
$\frac{5}{32}$	$\frac{1}{2}$	$1\frac{5}{8}$
$\frac{3}{16}$	$\frac{9}{16}$	2
$\frac{1}{4}$	$\frac{11}{16}$	$2\frac{1}{4}$
$\frac{5}{16}$	$\frac{3}{4}$	$2\frac{3}{8}$
$\frac{3}{8}$	1	$2\frac{5}{8}$

Figure 7-18

Typical uses for retaining rings.
(a) External ring and (b) its application; (c) internal ring and (d) its application.



of $d/10$ from the start of the shoulder fillet will prevent the two stress concentrations from combining with each other.⁹

Retaining Rings

A retaining ring is frequently used instead of a shaft shoulder or a sleeve to axially position a component on a shaft or in a housing bore. As shown in Fig. 7-18, a groove is cut in the shaft or bore to receive the spring retainer. For sizes, dimensions, and axial load ratings, the manufacturers' catalogs should be consulted.

Appendix Tables A-15-16 and A-15-17 give values for stress concentration factors for flat-bottomed grooves in shafts, suitable for retaining rings. For the rings to seat nicely in the bottom of the groove, and support axial loads against the sides of the groove, the radius in the bottom of the groove must be reasonably sharp, typically about one-tenth of the groove width. This causes comparatively high values for stress concentration factors, around 5 for bending and axial, and 3 for torsion. Care should be taken in using retaining rings, particularly in locations with high bending stresses.

⁹Ibid, p. 381.

EXAMPLE 7-6

A UNS G10350 steel shaft, heat-treated to a minimum yield strength of 75 kpsi, has a diameter of $1\frac{7}{16}$ in. The shaft rotates at 600 rev/min and transmits 40 hp through a gear. Select an appropriate key for the gear.

Solution

A $\frac{3}{8}$ -in square key is selected, UNS G10200 cold-drawn steel being used. The design will be based on a yield strength of 65 kpsi. A factor of safety of 2.80 will be employed in the absence of exact information about the nature of the load.

The torque is obtained from the horsepower equation

$$T = \frac{63\,025H}{n} = \frac{(63\,025)(40)}{600} = 4200 \text{ lbf} \cdot \text{in}$$

From Fig. 7-19, the force F at the surface of the shaft is

$$F = \frac{T}{r} = \frac{4200}{1.4375/2} = 5850 \text{ lbf}$$

By the distortion-energy theory, the shear strength is

$$S_{sy} = 0.577S_y = (0.577)(65) = 37.5 \text{ kpsi}$$

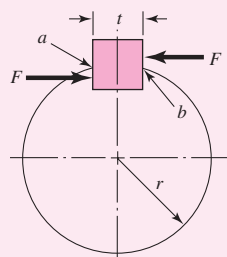


Figure 7-19

Failure by shear across the area ab will create a stress of $\tau = F/tl$. Substituting the strength divided by the factor of safety for τ gives

$$\frac{S_{sy}}{n} = \frac{F}{tl} \quad \text{or} \quad \frac{37.5(10)^3}{2.80} = \frac{5850}{0.375l}$$

or $l = 1.16$ in. To resist crushing, the area of one-half the face of the key is used:

$$\frac{S_y}{n} = \frac{F}{tl/2} \quad \text{or} \quad \frac{65(10)^3}{2.80} = \frac{5850}{0.375l/2}$$

and $l = 1.34$ in. The hub length of a gear is usually greater than the shaft diameter, for stability. If the key, in this example, is made equal in length to the hub, it would therefore have ample strength, since it would probably be $1\frac{7}{16}$ in or longer.

7-8 Limits and Fits

The designer is free to adopt any geometry of fit for shafts and holes that will ensure the intended function. There is sufficient accumulated experience with commonly recurring situations to make standards useful. There are two standards for limits and fits in the United States, one based on inch units and the other based on metric units.¹⁰ These differ in nomenclature, definitions, and organization. No point would be served by separately studying each of the two systems. The metric version is the newer of the two and is well organized, and so here we present only the metric version but include a set of inch conversions to enable the same system to be used with either system of units.

In using the standard, *capital letters always refer to the hole; lowercase letters are used for the shaft.*

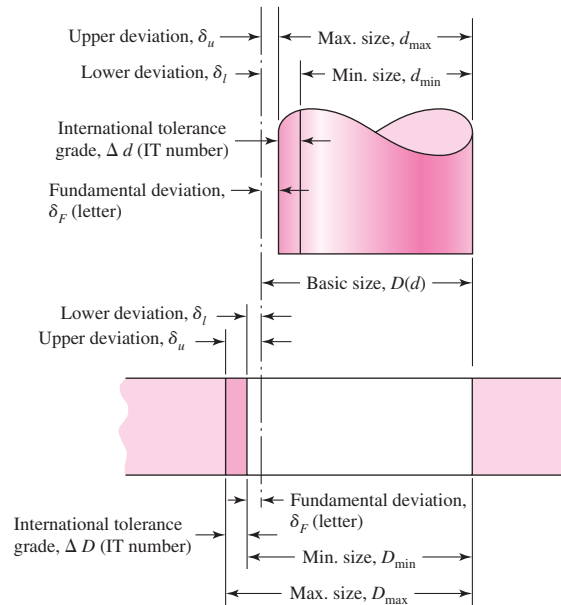
The definitions illustrated in Fig. 7-20 are explained as follows:

- *Basic size* is the size to which limits or deviations are assigned and is the same for both members of the fit.
- *Deviation* is the algebraic difference between a size and the corresponding basic size.
- *Upper deviation* is the algebraic difference between the maximum limit and the corresponding basic size.
- *Lower deviation* is the algebraic difference between the minimum limit and the corresponding basic size.
- *Fundamental deviation* is either the upper or the lower deviation, depending on which is closer to the basic size.
- *Tolerance* is the difference between the maximum and minimum size limits of a part.
- *International tolerance grade* numbers (IT) designate groups of tolerances such that the tolerances for a particular IT number have the same relative level of accuracy but vary depending on the basic size.
- *Hole basis* represents a system of fits corresponding to a basic hole size. The fundamental deviation is H.

¹⁰*Preferred Limits and Fits for Cylindrical Parts*, ANSI B4.1-1967. *Preferred Metric Limits and Fits*, ANSI B4.2-1978.

Figure 7-20

Definitions applied to a cylindrical fit.



- *Shaft basis* represents a system of fits corresponding to a basic shaft size. The fundamental deviation is h . The shaft-basis system is not included here.

The magnitude of the tolerance zone is the variation in part size and is the same for both the internal and the external dimensions. The tolerance zones are specified in international tolerance grade numbers, called IT numbers. The smaller grade numbers specify a smaller tolerance zone. These range from IT0 to IT16, but only grades IT6 to IT11 are needed for the preferred fits. These are listed in Tables A–11 to A–13 for basic sizes up to 16 in or 400 mm.

The standard uses *tolerance position letters*, with capital letters for internal dimensions (holes) and lowercase letters for external dimensions (shafts). As shown in Fig. 7–20, the fundamental deviation locates the tolerance zone relative to the basic size.

Table 7–9 shows how the letters are combined with the tolerance grades to establish a preferred fit. The ISO symbol for the hole for a sliding fit with a basic size of 32 mm is 32H7. Inch units are not a part of the standard. However, the designation $(1\frac{3}{8} \text{ in}) \text{ H7}$ includes the same information and is recommended for use here. In both cases, the capital letter H establishes the fundamental deviation and the number 7 defines a tolerance grade of IT7.

For the sliding fit, the corresponding shaft dimensions are defined by the symbol 32g6 $[(1\frac{3}{8} \text{ in})\text{g}6]$.

The fundamental deviations for shafts are given in Tables A–11 and A–13. For letter codes c , d , f , g , and h ,

$$\begin{aligned} \text{Upper deviation} &= \text{fundamental deviation} \\ \text{Lower deviation} &= \text{upper deviation} - \text{tolerance grade} \end{aligned}$$

For letter codes k , n , p , s , and u , the deviations for shafts are

$$\begin{aligned} \text{Lower deviation} &= \text{fundamental deviation} \\ \text{Upper deviation} &= \text{lower deviation} + \text{tolerance grade} \end{aligned}$$

Table 7–9

Descriptions of Preferred Fits Using the Basic Hole System

Source: *Preferred Metric Limits and Fits*, ANSI B4.2-1978. See also BS 4500.

Type of Fit	Description	Symbol
Clearance	<i>Loose running fit</i> : for wide commercial tolerances or allowances on external members	H11/c11
	<i>Free running fit</i> : not for use where accuracy is essential, but good for large temperature variations, high running speeds, or heavy journal pressures	H9/d9
	<i>Close running fit</i> : for running on accurate machines and for accurate location at moderate speeds and journal pressures	H8/f7
	<i>Sliding fit</i> : where parts are not intended to run freely, but must move and turn freely and locate accurately	H7/g6
	<i>Locational clearance fit</i> : provides snug fit for location of stationary parts, but can be freely assembled and disassembled	H7/h6
Transition	<i>Locational transition fit</i> for accurate location, a compromise between clearance and interference	H7/k6
	<i>Locational transition fit</i> for more accurate location where greater interference is permissible	H7/n6
Interference	<i>Locational interference fit</i> : for parts requiring rigidity and alignment with prime accuracy of location but without special bore pressure requirements	H7/p6
	<i>Medium drive fit</i> : for ordinary steel parts or shrink fits on light sections, the tightest fit usable with cast iron	H7/s6
	<i>Force fit</i> : suitable for parts that can be highly stressed or for shrink fits where the heavy pressing forces required are impractical	H7/u6

The lower deviation H (for holes) is zero. For these, the upper deviation equals the tolerance grade.

As shown in Fig. 7–20, we use the following notation:

$$\begin{aligned}
 D &= \text{basic size of hole} \\
 d &= \text{basic size of shaft} \\
 \delta_u &= \text{upper deviation} \\
 \delta_l &= \text{lower deviation} \\
 \delta_F &= \text{fundamental deviation} \\
 \Delta D &= \text{tolerance grade for hole} \\
 \Delta d &= \text{tolerance grade for shaft}
 \end{aligned}$$

Note that these quantities are all deterministic. Thus, for the hole,

$$D_{\max} = D + \Delta D \quad D_{\min} = D \quad (7-36)$$

For shafts with clearance fits c, d, f, g, and h,

$$d_{\max} = d + \delta_F \quad d_{\min} = d + \delta_F - \Delta d \quad (7-37)$$

For shafts with interference fits k, n, p, s, and u,

$$d_{\min} = d + \delta_F \quad d_{\max} = d + \delta_F + \Delta d \quad (7-38)$$

EXAMPLE 7-7 Find the shaft and hole dimensions for a loose running fit with a 34-mm basic size.

Solution From Table 7-9, the ISO symbol is 34H11/c11. From Table A-11, we find that tolerance grade IT11 is 0.160 mm. The symbol 34H11/c11 therefore says that $\Delta D = \Delta d = 0.160$ mm. Using Eq. (7-36) for the hole, we get

Answer
$$D_{\max} = D + \Delta D = 34 + 0.160 = 34.160 \text{ mm}$$

Answer
$$D_{\min} = D = 34.000 \text{ mm}$$

The shaft is designated as a 34c11 shaft. From Table A-12, the fundamental deviation is $\delta_F = -0.120$ mm. Using Eq. (7-37), we get for the shaft dimensions

Answer
$$d_{\max} = d + \delta_F = 34 + (-0.120) = 33.880 \text{ mm}$$

Answer
$$d_{\min} = d + \delta_F - \Delta d = 34 + (-0.120) - 0.160 = 33.720 \text{ mm}$$

EXAMPLE 7-8 Find the hole and shaft limits for a medium drive fit using a basic hole size of 2 in.

Solution The symbol for the fit, from Table 7-8, in inch units is (2 in)H7/s6. For the hole, we use Table A-13 and find the IT7 grade to be $\Delta D = 0.0010$ in. Thus, from Eq. (7-36),

Answer
$$D_{\max} = D + \Delta D = 2 + 0.0010 = 2.0010 \text{ in}$$

Answer
$$D_{\min} = D = 2.0000 \text{ in}$$

The IT6 tolerance for the shaft is $\Delta d = 0.0006$ in. Also, from Table A-14, the fundamental deviation is $\delta_F = 0.0017$ in. Using Eq. (7-38), we get for the shaft that

Answer
$$d_{\min} = d + \delta_F = 2 + 0.0017 = 2.0017 \text{ in}$$

Answer
$$d_{\max} = d + \delta_F + \Delta d = 2 + 0.0017 + 0.0006 = 2.0023 \text{ in}$$

Stress and Torque Capacity in Interference Fits

Interference fits between a shaft and its components can sometimes be used effectively to minimize the need for shoulders and keyways. The stresses due to an interference fit can be obtained by treating the shaft as a cylinder with a uniform external pressure, and the hub as a hollow cylinder with a uniform internal pressure. Stress equations for these situations were developed in Sec. 3-16, and will be converted here from radius terms into diameter terms to match the terminology of this section.

The pressure p generated at the interface of the interference fit, from Eq. (3–56) converted into terms of diameters, is given by

$$p = \frac{\delta}{\frac{d}{E_o} \left(\frac{d_o^2 + d^2}{d_o^2 - d^2} + \nu_o \right) + \frac{d}{E_i} \left(\frac{d^2 + d_i^2}{d^2 - d_i^2} - \nu_i \right)} \quad (7-39)$$

or, in the case where both members are of the same material,

$$p = \frac{E\delta}{2d^3} \left[\frac{(d_o^2 - d^2)(d^2 - d_i^2)}{d_o^2 - d_i^2} \right] \quad (7-40)$$

where d is the nominal shaft diameter, d_i is the inside diameter (if any) of the shaft, d_o is the outside diameter of the hub, E is Young's modulus, and ν is Poisson's ratio, with subscripts o and i for the outer member (hub) and inner member (shaft), respectively. δ is the *diametral* interference between the shaft and hub, that is, the difference between the shaft outside diameter and the hub inside diameter.

$$\delta = d_{\text{shaft}} - d_{\text{hub}} \quad (7-41)$$

Since there will be tolerances on both diameters, the maximum and minimum pressures can be found by applying the maximum and minimum interferences. Adopting the notation from Fig. 7–20, we write

$$\delta_{\min} = d_{\min} - D_{\max} \quad (7-42)$$

$$\delta_{\max} = d_{\max} - D_{\min} \quad (7-43)$$

where the diameter terms are defined in Eqs. (7–36) and (7–38). The maximum interference should be used in Eq. (7–39) or (7–40) to determine the maximum pressure to check for excessive stress.

From Eqs. (3–58) and (3–59), with radii converted to diameters, the tangential stresses at the interface of the shaft and hub are

$$\sigma_{t, \text{shaft}} = -p \frac{d^2 + d_i^2}{d^2 - d_i^2} \quad (7-44)$$

$$\sigma_{t, \text{hub}} = p \frac{d_o^2 + d^2}{d_o^2 - d^2} \quad (7-45)$$

The radial stresses at the interface are simply

$$\sigma_{r, \text{shaft}} = -p \quad (7-46)$$

$$\sigma_{r, \text{hub}} = -p \quad (7-47)$$

The tangential and radial stresses are orthogonal, and should be combined using a failure theory to compare with the yield strength. If either the shaft or hub yields during assembly, the full pressure will not be achieved, diminishing the torque that can be transmitted. The interaction of the stresses due to the interference fit with the other stresses in the shaft due to shaft loading is not trivial. Finite-element analysis of the interface would be appropriate when warranted. A stress element on the surface of a rotating shaft will experience a completely reversed bending stress in the longitudinal direction, as well as the steady compressive stresses in the tangential and radial directions. This is a three-dimensional stress element. Shear stress due to torsion in shaft may also be present. Since the stresses due to the press fit are compressive, the fatigue situation is usually actually improved. For this reason, it may be acceptable to simplify

the shaft analysis by ignoring the steady compressive stresses due to the press fit. There is, however, a stress concentration effect in the shaft bending stress near the ends of the hub, due to the sudden change from compressed to uncompressed material. The design of the hub geometry, and therefore its uniformity and rigidity, can have a significant effect on the specific value of the stress concentration factor, making it difficult to report generalized values. For first estimates, values are typically not greater than 2.

The amount of torque that can be transmitted through an interference fit can be estimated with a simple friction analysis at the interface. The friction force is the product of the coefficient of friction f and the normal force acting at the interface. The normal force can be represented by the product of the pressure p and the surface area A of interface. Therefore, the friction force F_f is

$$F_f = fN = f(pA) = f[p2\pi(d/2)l] = fp\pi dl \quad (7-48)$$

where l is the length of the hub. This friction force is acting with a moment arm of $d/2$ to provide the torque capacity of the joint, so

$$\begin{aligned} T &= F_f d/2 = fp\pi dl(d/2) \\ T &= (\pi/2)fpld^2 \end{aligned} \quad (7-49)$$

The minimum interference, from Eq. (7-42), should be used to determine the minimum pressure to check for the maximum amount of torque that the joint should be designed to transmit without slipping.

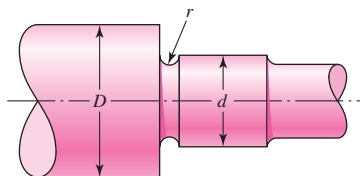
PROBLEMS

- 7-1** A shaft is loaded in bending and torsion such that $M_a = 600 \text{ lbf} \cdot \text{in}$, $T_a = 400 \text{ lbf} \cdot \text{in}$, $M_m = 500 \text{ lbf} \cdot \text{in}$, and $T_m = 300 \text{ lbf} \cdot \text{in}$. For the shaft, $S_u = 100 \text{ kpsi}$ and $S_y = 80 \text{ kpsi}$, and a fully corrected endurance limit of $S_e = 30 \text{ kpsi}$ is assumed. Let $K_f = 2.2$ and $K_{fs} = 1.8$. With a design factor of 2.0 determine the minimum acceptable diameter of the shaft using the
- DE-Gerber criterion.
 - DE-elliptic criterion.
 - DE-Soderberg criterion.
 - DE-Goodman criterion.
- Discuss and compare the results.

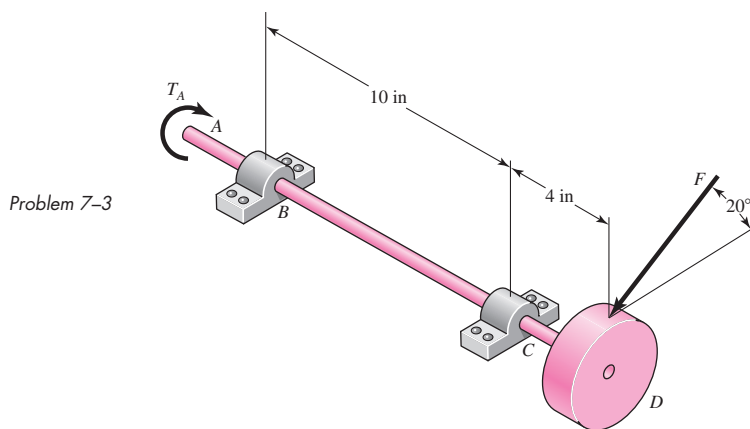
- 7-2** The section of shaft shown in the figure is to be designed to approximate relative sizes of $d = 0.75D$ and $r = D/20$ with diameter d conforming to that of standard metric rolling-bearing bore sizes. The shaft is to be made of SAE 2340 steel, heat-treated to obtain minimum strengths in the shoulder area of 1226-MPa ultimate tensile strength and 1130-MPa yield strength with a Brinell hardness not less than 368. At the shoulder the shaft is subjected to a completely reversed bending moment of $70 \text{ N} \cdot \text{m}$, accompanied by a steady torsion of $45 \text{ N} \cdot \text{m}$. Use a design factor of 2.5 and size the shaft for an infinite life.

Problem 7-2

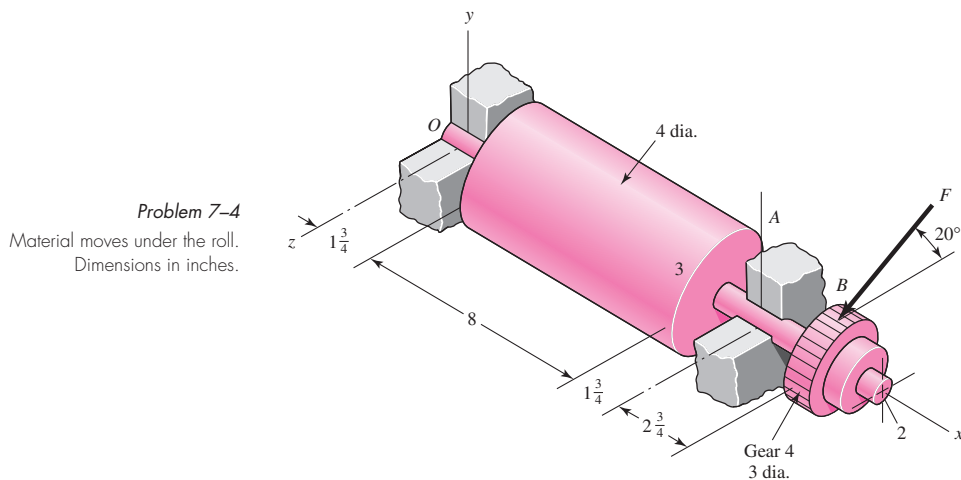
Section of a shaft containing a grinding-relief groove. Unless otherwise specified, the diameter at the root of the groove $d_r = d - 2r$, and though the section of diameter d is ground, the root of the groove is still a machined surface.



- 7-3** The rotating solid steel shaft is simply supported by bearings at points B and C and is driven by a gear (not shown) which meshes with the spur gear at D , which has a 6-in pitch diameter. The force F from the drive gear acts at a pressure angle of 20° . The shaft transmits a torque to point A of $T_A = 3000 \text{ lbf} \cdot \text{in}$. The shaft is machined from steel with $S_y = 60 \text{ kpsi}$ and $S_{ut} = 80 \text{ kpsi}$. Using a factor of safety of 2.5, determine the minimum allowable diameter of the 10-in section of the shaft based on (a) a static yield analysis using the distortion energy theory and (b) a fatigue-failure analysis. Assume sharp fillet radii at the bearing shoulders for estimating stress concentration factors.



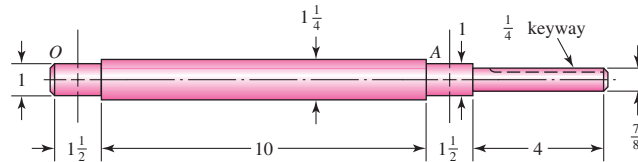
- 7-4** A geared industrial roll shown in the figure is driven at 300 rev/min by a force F acting on a 3-in-diameter pitch circle as shown. The roll exerts a normal force of 30 lbf/in of roll length on the material being pulled through. The material passes under the roll. The coefficient of friction is 0.40. Develop the moment and shear diagrams for the shaft modeling the roll force as (a) a concentrated force at the center of the roll, and (b) a uniformly distributed force along the roll. These diagrams will appear on two orthogonal planes.



- 7-5** Design a shaft for the situation of the industrial roll of Prob. 7-4 with a design factor of 2 and a reliability goal of 0.999 against fatigue failure. Plan for a ball bearing on the left and a cylindrical roller on the right. For deformation use a factor of safety of 2.

- 7-6** The figure shows a proposed design for the industrial roll shaft of Prob. 7-4. Hydrodynamic film bearings are to be used. All surfaces are machined except the journals, which are ground and polished. The material is 1035 HR steel. Perform a design assessment. Is the design satisfactory?

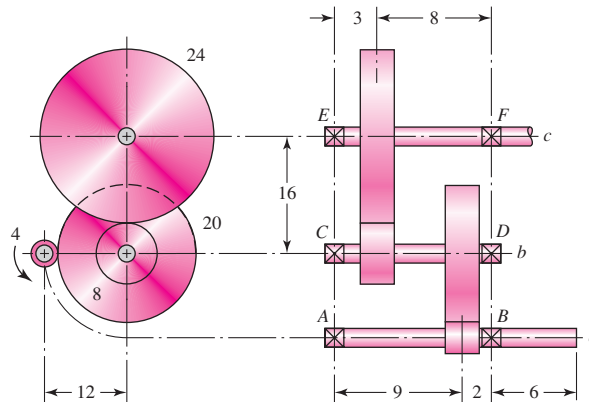
Problem 7-6
Bearing shoulder fillets 0.030 in, others $\frac{1}{16}$ in. Sled-runner keyway is $3\frac{1}{2}$ in long. Dimensions in inches.



- 7-7** In the double-reduction gear train shown, shaft *a* is driven by a motor attached by a flexible coupling attached to the overhang. The motor provides a torque of 2500 lbf · in at a speed of 1200 rpm. The gears have 20° pressure angles, with diameters shown on the figure. Use an AISI 1020 cold-drawn steel. Design one of the shafts (as specified by the instructor) with a design factor of 1.5 by performing the following tasks.

- Sketch a general shaft layout, including means to locate the gears and bearings, and to transmit the torque.
- Perform a force analysis to find the bearing reaction forces, and generate shear and bending moment diagrams.
- Determine potential critical locations for stress design.
- Determine critical diameters of the shaft based on fatigue and static stresses at the critical locations.
- Make any other dimensional decisions necessary to specify all diameters and axial dimensions. Sketch the shaft to scale, showing all proposed dimensions.
- Check the deflection at the gear, and the slopes at the gear and the bearings for satisfaction of the recommended limits in Table 7-2.
- If any of the deflections exceed the recommended limits, make appropriate changes to bring them all within the limits.

Problem 7-7
Dimensions in inches.

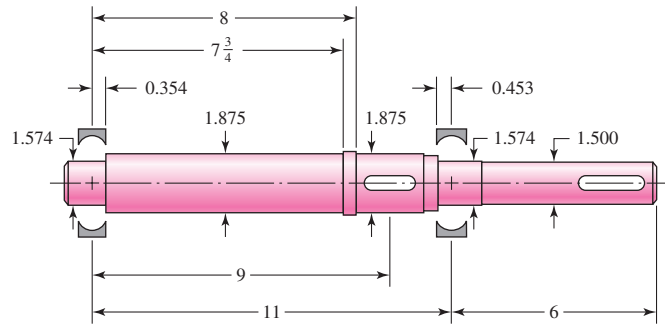


- 7-8** In the figure is a proposed shaft design to be used for the input shaft *a* in Prob. 7-7. A ball bearing is planned for the left bearing, and a cylindrical roller bearing for the right.

- Determine the minimum fatigue factor of safety by evaluating at any critical locations. Use a fatigue failure criteria that is considered to be typical of the failure data, rather than one that is considered conservative. Also ensure that the shaft does not yield in the first load cycle.

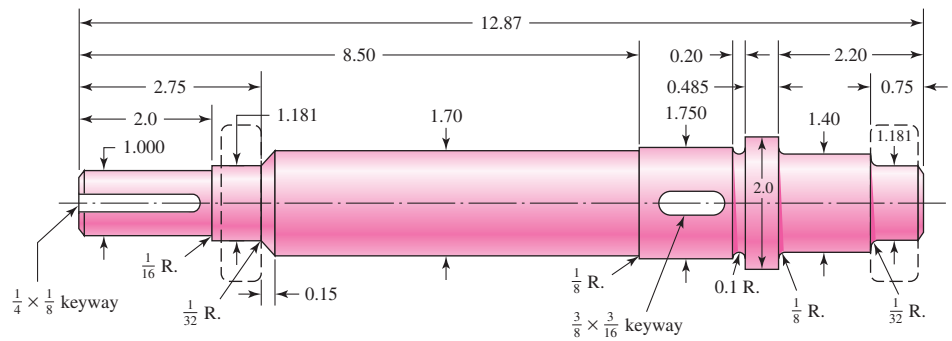
(b) Check the design for adequacy with respect to deformation, according to the recommendations in Table 7-2.

Problem 7-8
Shoulder fillets at bearing seat 0.030-in radius, others $\frac{1}{8}$ -in radius, except right-hand bearing seat transition, $\frac{1}{4}$ in. The material is 1030 HR. Keyways $\frac{3}{8}$ in wide by $\frac{3}{16}$ in deep. Dimensions in inches.



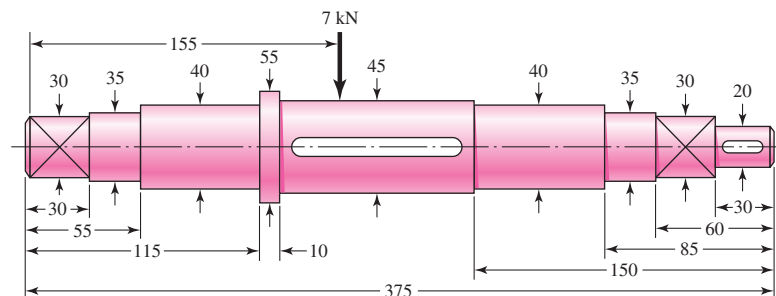
7-9 The shaft shown in the figure is driven by a gear at the right keyway, drives a fan at the left keyway, and is supported by two deep-groove ball bearings. The shaft is made from AISI 1020 cold-drawn steel. At steady-state speed, the gear transmits a radial load of 230 lbf and a tangential load of 633 lbf at a pitch diameter of 8 in.
(a) Determine fatigue factors of safety at any potentially critical locations.
(b) Check that deflections satisfy the suggested minimums for bearings and gears.

Problem 7-9
Dimensions in inches.



7-10 An AISI 1020 cold-drawn steel shaft with the geometry shown in the figure carries a transverse load of 7 kN and a torque of 107 N · m. Examine the shaft for strength and deflection. If the largest allowable slope at the bearings is 0.001 rad and at the gear mesh is 0.0005 rad, what

Problem 7-10
Dimensions in millimeters.



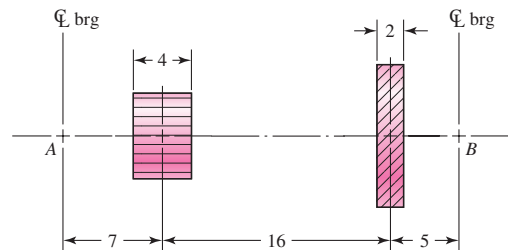
All fillets 2 mm

is the factor of safety guarding against damaging distortion? What is the factor of safety guarding against a fatigue failure? If the shaft turns out to be unsatisfactory, what would you recommend to correct the problem?

7-11

A shaft is to be designed to support the spur pinion and helical gear shown in the figure on two bearings spaced 28 in center-to-center. Bearing *A* is a cylindrical roller and is to take only radial load; bearing *B* is to take the thrust load of 220 lbf produced by the helical gear and its share of the radial load. The bearing at *B* can be a ball bearing. The radial loads of both gears are in the same plane, and are 660 lbf for the pinion and 220 lbf for the gear. The shaft speed is 1150 rev/min. Design the shaft. Make a sketch to scale of the shaft showing all fillet sizes, keyways, shoulders, and diameters. Specify the material and its heat treatment.

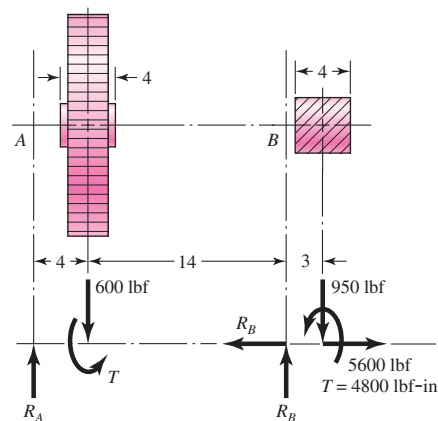
Problem 7-11
Dimensions in inches.



7-12

A heat-treated steel shaft is to be designed to support the spur gear and the overhanging worm shown in the figure. A bearing at *A* takes pure radial load. The bearing at *B* takes the worm-thrust load for either direction of rotation. The dimensions and the loading are shown in the figure; note that the radial loads are in the same plane. Make a complete design of the shaft, including a sketch of the shaft showing all dimensions. Identify the material and its heat treatment (if necessary). Provide an assessment of your final design. The shaft speed is 310 rev/min.

Problem 7-12
Dimensions in inches.

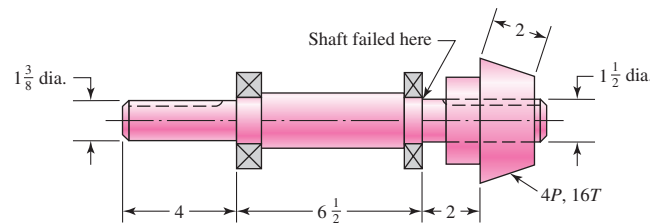


7-13

A bevel-gear shaft mounted on two 40-mm O2-series ball bearings is driven at 1720 rev/min by a motor connected through a flexible coupling. The figure shows the shaft, the gear, and the bearings. The shaft has been giving trouble—in fact, two of them have already failed—and the down time on the machine is so expensive that you have decided to redesign the shaft yourself rather than order replacements. A hardness check of the two shafts in the vicinity of the fracture of the two shafts showed an average of 198 Bhn for one and 204 Bhn of the other. As closely as you can estimate the two shafts failed at a life measure between 600 000 and 1 200 000 cycles

of operation. The surfaces of the shaft were machined, but not ground. The fillet sizes were not measured, but they correspond with the recommendations for the ball bearings used. You know that the load is a pulsating or shock-type load, but you have no idea of the magnitude, because the shaft drives an indexing mechanism, and the forces are inertial. The keyways are $\frac{3}{8}$ in wide by $\frac{3}{16}$ in deep. The straight-toothed bevel pinion drives a 48-tooth bevel gear. Specify a new shaft in sufficient detail to ensure a long and trouble-free life.

Problem 7-13
Dimensions in inches.



7-14 A 1-in-diameter uniform steel shaft is 24 in long between bearings.

- Find the lowest critical speed of the shaft.
- If the goal is to double the critical speed, find the new diameter.
- A half-size model of the original shaft has what critical speed?

7-15 Demonstrate how rapidly Rayleigh's method converges for the uniform-diameter solid shaft of Prob. 7-14, by partitioning the shaft into first one, then two, and finally three elements.

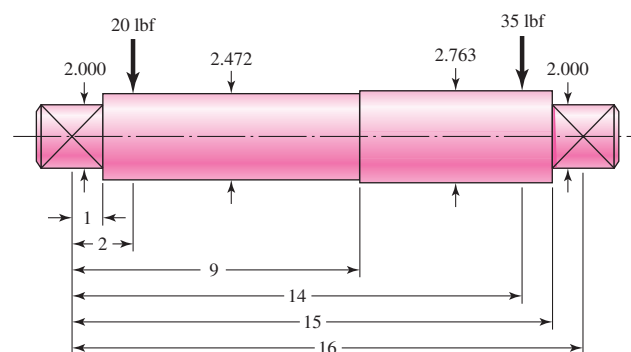
7-16 Compare Eq. (7-27) for the angular frequency of a two-disk shaft with Eq. (7-28), and note that the constants in the two equations are equal.

- Develop an expression for the *second* critical speed.
- Estimate the second critical speed of the shaft addressed in Ex. 7-5, parts *a* and *b*.

7-17 For a uniform-diameter shaft, does hollowing the shaft increase or decrease the critical speed?


7-18 The shaft shown in the figure carries a 20-lbf gear on the left and a 35-lbf gear on the right. Estimate the first critical speed due to the loads, the shaft's critical speed without the loads, and the critical speed of the combination.

Problem 7-18
Dimensions in inches.



7-19 A transverse drilled and reamed hole can be used in a solid shaft to hold a pin that locates and holds a mechanical element, such as the hub of a gear, in axial position, and allows for the transmission of torque. Since a small-diameter hole introduces high stress concentration, and a larger diameter hole erodes the area resisting bending and torsion, investigate the existence of a pin diameter with minimum adverse affect on the shaft. Then formulate a design rule. (*Hint:* Use Table A-16.)

- 7-20** A guide pin is required to align the assembly of a two-part fixture. The nominal size of the pin is 15 mm. Make the dimensional decisions for a 15-mm basic size locational clearance fit.
- 7-21** An interference fit of a cast-iron hub of a gear on a steel shaft is required. Make the dimensional decisions for a 45-mm basic size medium drive fit.
- 7-22** A pin is required for forming a linkage pivot. Find the dimensions required for a 50-mm basic size pin and clevis with a sliding fit.
- 7-23** A journal bearing and bushing need to be described. The nominal size is 1 in. What dimensions are needed for a 1-in basic size with a close running fit if this is a lightly loaded journal and bushing assembly?
- 7-24** A gear and shaft with nominal diameter of 1.5 in are to be assembled with a *medium drive fit*, as specified in Table 7-9. The gear has a hub, with an outside diameter of 2.5 in, and an overall length of 2 in. The shaft is made from AISI 1020 CD steel, and the gear is made from steel that has been through hardened to provide $S_u = 100$ kpsi and $S_y = 85$ kpsi.
- Specify dimensions with tolerances for the shaft and gear bore to achieve the desired fit.
 - Determine the minimum and maximum pressures that could be experienced at the interface with the specified tolerances.
 - Determine the worst-case static factors of safety guarding against yielding at assembly for the shaft and the gear based on the distortion energy failure theory.
 - Determine the maximum torque that the joint should be expected to transmit without slipping, i.e., when the interference pressure is at a minimum for the specified tolerances.



Screws, Fasteners, and the Design of Nonpermanent Joints

Chapter Outline

- 8-1** Thread Standards and Definitions **396**
- 8-2** The Mechanics of Power Screws **400**
- 8-3** Threaded Fasteners **408**
- 8-4** Joints—Fastener Stiffness **410**
- 8-5** Joints—Member Stiffness **413**
- 8-6** Bolt Strength **417**
- 8-7** Tension Joints—The External Load **421**
- 8-8** Relating Bolt Torque to Bolt Tension **422**
- 8-9** Statically Loaded Tension Joint with Preload **425**
- 8-10** Gasketed Joints **429**
- 8-11** Fatigue Loading of Tension Joints **429**
- 8-12** Bolted and Riveted Joints Loaded in Shear **435**

The helical-thread screw was undoubtedly an extremely important mechanical invention. It is the basis of power screws, which change angular motion to linear motion to transmit power or to develop large forces (presses, jacks, etc.), and threaded fasteners, an important element in nonpermanent joints.

This book presupposes a knowledge of the elementary methods of fastening. Typical methods of fastening or joining parts use such devices as bolts, nuts, cap screws, setscrews, rivets, spring retainers, locking devices, pins, keys, welds, and adhesives. Studies in engineering graphics and in metal processes often include instruction on various joining methods, and the curiosity of any person interested in mechanical engineering naturally results in the acquisition of a good background knowledge of fastening methods. Contrary to first impressions, the subject is one of the most interesting in the entire field of mechanical design.

One of the key targets of current design for manufacture is to reduce the number of fasteners. However, there will always be a need for fasteners to facilitate disassembly for whatever purposes. For example, jumbo jets such as Boeing's 747 require as many as 2.5 million fasteners, some of which cost several dollars apiece. To keep costs down, aircraft manufacturers, and their subcontractors, constantly review new fastener designs, installation techniques, and tooling.

The number of innovations in the fastener field over any period you might care to mention has been tremendous. An overwhelming variety of fasteners are available for the designer's selection. Serious designers generally keep specific notebooks on fasteners alone. Methods of joining parts are extremely important in the engineering of a quality design, and it is necessary to have a thorough understanding of the performance of fasteners and joints under all conditions of use and design.

8-1 Thread Standards and Definitions

The terminology of screw threads, illustrated in Fig. 8-1, is explained as follows:

The *pitch* is the distance between adjacent thread forms measured parallel to the thread axis. The pitch in U.S. units is the reciprocal of the number of thread forms per inch N .

The *major diameter* d is the largest diameter of a screw thread.

The *minor* (or root) *diameter* d_r is the smallest diameter of a screw thread.

The pitch diameter d_p is a theoretical diameter between the major and minor diameters.

The *lead* l , not shown, is the distance the nut moves parallel to the screw axis when the nut is given one turn. For a single thread, as in Fig. 8-1, the lead is the same as the pitch.

A *multiple-threaded* product is one having two or more threads cut beside each other (imagine two or more strings wound side by side around a pencil). Standardized products such as screws, bolts, and nuts all have single threads; a *double-threaded* screw has a lead equal to twice the pitch, a *triple-threaded* screw has a lead equal to 3 times the pitch, and so on.

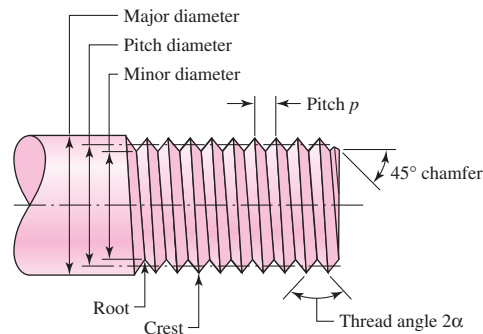
All threads are made according to the *right-hand rule* unless otherwise noted.

The *American National (Unified)* thread standard has been approved in this country and in Great Britain for use on all standard threaded products. The thread angle is 60° and the crests of the thread may be either flat or rounded.

Figure 8-2 shows the thread geometry of the metric M and MJ profiles. The M profile replaces the inch class and is the basic ISO 68 profile with 60° symmetric threads. The MJ profile has a rounded fillet at the root of the external thread and a

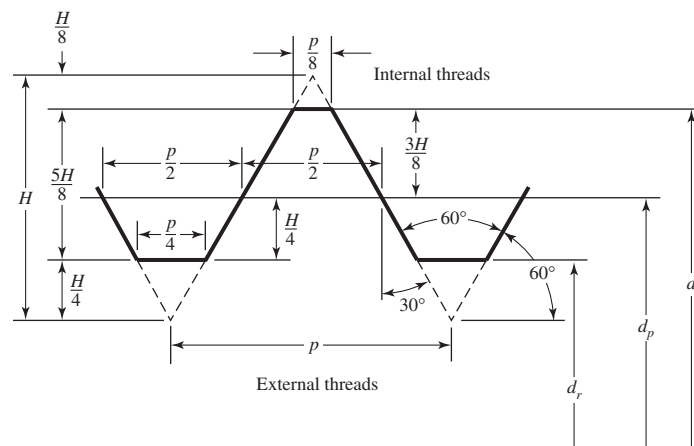
Figure 8-1

Terminology of screw threads. Sharp vee threads shown for clarity; the crests and roots are actually flattened or rounded during the forming operation.

**Figure 8-2**

Basic profile for metric M and MJ threads.

d = major diameter
 d_r = minor diameter
 d_p = pitch diameter
 p = pitch
 $H = \frac{\sqrt{3}}{2} p$



larger minor diameter of both the internal and external threads. This profile is especially useful where high fatigue strength is required.

Tables 8–1 and 8–2 will be useful in specifying and designing threaded parts. Note that the thread size is specified by giving the pitch p for metric sizes and by giving the number of threads per inch N for the Unified sizes. The screw sizes in Table 8–2 with diameter under $\frac{1}{4}$ in are numbered or gauge sizes. The second column in Table 8–2 shows that a No. 8 screw has a nominal major diameter of 0.1640 in.

A great many tensile tests of threaded rods have shown that an unthreaded rod having a diameter equal to the mean of the pitch diameter and minor diameter will have the same tensile strength as the threaded rod. The area of this unthreaded rod is called the tensile-stress area A_t of the threaded rod; values of A_t are listed in both tables.

Two major Unified thread series are in common use: UN and UNR. The difference between these is simply that a root radius must be used in the UNR series. Because of reduced thread stress-concentration factors, UNR series threads have improved fatigue strengths. Unified threads are specified by stating the nominal major diameter, the number of threads per inch, and the thread series, for example, $\frac{5}{8}$ in-18 UNRF or 0.625 in-18 UNRF.

Metric threads are specified by writing the diameter and pitch in millimeters, in that order. Thus, M12 \times 1.75 is a thread having a nominal major diameter of 12 mm and a pitch of 1.75 mm. Note that the letter M, which precedes the diameter, is the clue to the metric designation.

Table 8-1

Diameters and Areas of
Coarse-Pitch and Fine-
Pitch Metric Threads.*

Nominal Major Diameter d mm	Coarse-Pitch Series			Fine-Pitch Series		
	Pitch p mm	Tensile- Stress Area A_t mm ²	Minor- Diameter Area A_r mm ²	Pitch p mm	Tensile- Stress Area A_t mm ²	Minor- Diameter Area A_r mm ²
1.6	0.35	1.27	1.07			
2	0.40	2.07	1.79			
2.5	0.45	3.39	2.98			
3	0.5	5.03	4.47			
3.5	0.6	6.78	6.00			
4	0.7	8.78	7.75			
5	0.8	14.2	12.7			
6	1	20.1	17.9			
8	1.25	36.6	32.8	1	39.2	36.0
10	1.5	58.0	52.3	1.25	61.2	56.3
12	1.75	84.3	76.3	1.25	92.1	86.0
14	2	115	104	1.5	125	116
16	2	157	144	1.5	167	157
20	2.5	245	225	1.5	272	259
24	3	353	324	2	384	365
30	3.5	561	519	2	621	596
36	4	817	759	2	915	884
42	4.5	1120	1050	2	1260	1230
48	5	1470	1380	2	1670	1630
56	5.5	2030	1910	2	2300	2250
64	6	2680	2520	2	3030	2980
72	6	3460	3280	2	3860	3800
80	6	4340	4140	1.5	4850	4800
90	6	5590	5360	2	6100	6020
100	6	6990	6740	2	7560	7470
110				2	9180	9080

*The equations and data used to develop this table have been obtained from ANSI B1.1-1974 and B18.3.1-1978. The minor diameter was found from the equation $d_r = d - 1.226869p$, and the pitch diameter from $d_p = d - 0.649519p$. The mean of the pitch diameter and the minor diameter was used to compute the tensile-stress area.

Square and Acme threads, shown in Fig. 8-3*a* and *b*, respectively, are used on screws when power is to be transmitted. Table 8-3 lists the preferred pitches for inch-series Acme threads. However, other pitches can be and often are used, since the need for a standard for such threads is not great.

Modifications are frequently made to both Acme and square threads. For instance, the square thread is sometimes modified by cutting the space between the teeth so as to have an included thread angle of 10 to 15°. This is not difficult, since these threads are usually cut with a single-point tool anyhow; the modification retains most of the high efficiency inherent in square threads and makes the cutting simpler. Acme threads

Table 8-2

Diameters and Area of Unified Screw Threads UNC and UNF*

Size Designation	Coarse Series—UNC				Fine Series—UNF		
	Nominal Major Diameter in	Threads per Inch N	Tensile-Stress Area A_t , in ²	Minor-Diameter Area A_r , in ²	Threads per Inch N	Tensile-Stress Area A_t , in ²	Minor-Diameter Area A_r , in ²
0	0.0600				80	0.001 80	0.001 51
1	0.0730	64	0.002 63	0.002 18	72	0.002 78	0.002 37
2	0.0860	56	0.003 70	0.003 10	64	0.003 94	0.003 39
3	0.0990	48	0.004 87	0.004 06	56	0.005 23	0.004 51
4	0.1120	40	0.006 04	0.004 96	48	0.006 61	0.005 66
5	0.1250	40	0.007 96	0.006 72	44	0.008 80	0.007 16
6	0.1380	32	0.009 09	0.007 45	40	0.010 15	0.008 74
8	0.1640	32	0.014 0	0.011 96	36	0.014 74	0.012 85
10	0.1900	24	0.017 5	0.014 50	32	0.020 0	0.017 5
12	0.2160	24	0.024 2	0.020 6	28	0.025 8	0.022 6
$\frac{1}{4}$	0.2500	20	0.031 8	0.026 9	28	0.036 4	0.032 6
$\frac{5}{16}$	0.3125	18	0.052 4	0.045 4	24	0.058 0	0.052 4
$\frac{3}{8}$	0.3750	16	0.077 5	0.067 8	24	0.087 8	0.080 9
$\frac{7}{16}$	0.4375	14	0.106 3	0.093 3	20	0.118 7	0.109 0
$\frac{1}{2}$	0.5000	13	0.141 9	0.125 7	20	0.159 9	0.148 6
$\frac{9}{16}$	0.5625	12	0.182	0.162	18	0.203	0.189
$\frac{5}{8}$	0.6250	11	0.226	0.202	18	0.256	0.240
$\frac{3}{4}$	0.7500	10	0.334	0.302	16	0.373	0.351
$\frac{7}{8}$	0.8750	9	0.462	0.419	14	0.509	0.480
1	1.0000	8	0.606	0.551	12	0.663	0.625
$1\frac{1}{4}$	1.2500	7	0.969	0.890	12	1.073	1.024
$1\frac{1}{2}$	1.5000	6	1.405	1.294	12	1.581	1.521

*This table was compiled from ANSI B1.1-1974. The minor diameter was found from the equation $d_r = d - 1.299\,038p$, and the pitch diameter from $d_p = d - 0.649\,519p$. The mean of the pitch diameter and the minor diameter was used to compute the tensile-stress area.

Figure 8-3

(a) Square thread; (b) Acme thread.

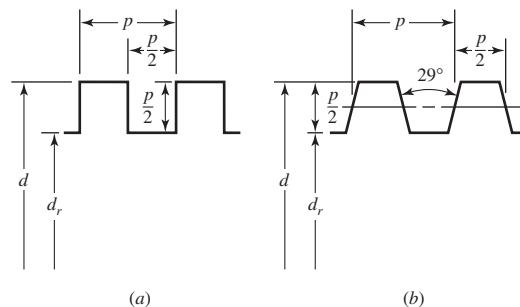


Table 8-3

Preferred Pitches for
Acme Threads

d , in	$\frac{1}{4}$	$\frac{5}{16}$	$\frac{3}{8}$	$\frac{1}{2}$	$\frac{5}{8}$	$\frac{3}{4}$	$\frac{7}{8}$	1	$1\frac{1}{4}$	$1\frac{1}{2}$	$1\frac{3}{4}$	2	$2\frac{1}{2}$	3
p , in	$\frac{1}{16}$	$\frac{1}{14}$	$\frac{1}{12}$	$\frac{1}{10}$	$\frac{1}{8}$	$\frac{1}{6}$	$\frac{1}{6}$	$\frac{1}{5}$	$\frac{1}{5}$	$\frac{1}{4}$	$\frac{1}{4}$	$\frac{1}{4}$	$\frac{1}{3}$	$\frac{1}{2}$

are sometimes modified to a stub form by making the teeth shorter. This results in a larger minor diameter and a somewhat stronger screw.

8-2 The Mechanics of Power Screws

A power screw is a device used in machinery to change angular motion into linear motion, and, usually, to transmit power. Familiar applications include the lead screws of lathes, and the screws for vises, presses, and jacks.

An application of power screws to a power-driven jack is shown in Fig. 8-4. You should be able to identify the worm, the worm gear, the screw, and the nut. Is the worm gear supported by one bearing or two?

Figure 8-4

The Joyce worm-gear screw
jack. (Courtesy Joyce-Dayton
Corp., Dayton, Ohio.)

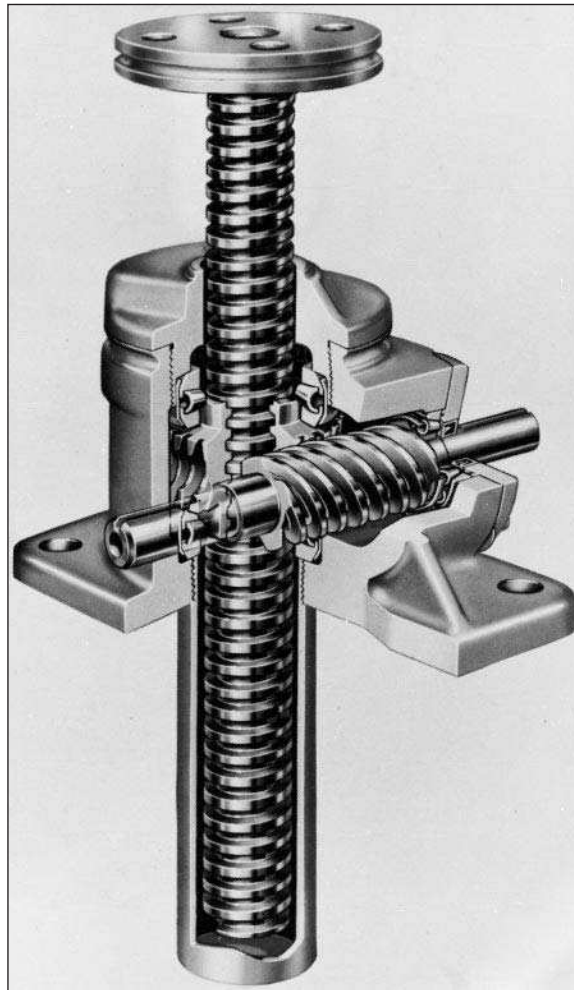
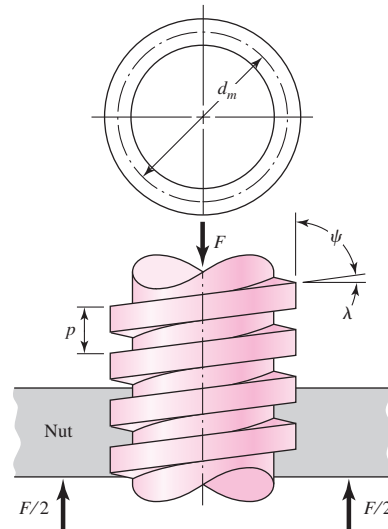
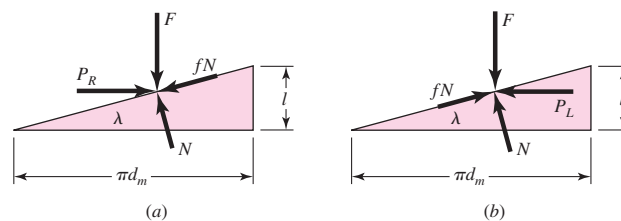


Figure 8-5

Portion of a power screw.

**Figure 8-6**

Force diagrams: (a) lifting the load; (b) lowering the load.



In Fig. 8-5 a square-threaded power screw with single thread having a mean diameter d_m , a pitch p , a lead angle λ , and a helix angle ψ is loaded by the axial compressive force F . We wish to find an expression for the torque required to raise this load, and another expression for the torque required to lower the load.

First, imagine that a single thread of the screw is unrolled or developed (Fig. 8-6) for exactly a single turn. Then one edge of the thread will form the hypotenuse of a right triangle whose base is the circumference of the mean-thread-diameter circle and whose height is the lead. The angle λ , in Figs. 8-5 and 8-6, is the lead angle of the thread. We represent the summation of all the unit axial forces acting upon the normal thread area by F . To raise the load, a force P_R acts to the right (Fig. 8-6a), and to lower the load, P_L acts to the left (Fig. 8-6b). The friction force is the product of the coefficient of friction f with the normal force N , and acts to oppose the motion. The system is in equilibrium under the action of these forces, and hence, for raising the load, we have

$$\sum F_H = P_R - N \sin \lambda - fN \cos \lambda = 0 \quad (a)$$

$$\sum F_V = F + fN \sin \lambda - N \cos \lambda = 0$$

In a similar manner, for lowering the load, we have

$$\sum F_H = -P_L - N \sin \lambda + fN \cos \lambda = 0 \quad (b)$$

$$\sum F_V = F - fN \sin \lambda - N \cos \lambda = 0$$

Since we are not interested in the normal force N , we eliminate it from each of these sets of equations and solve the result for P . For raising the load, this gives

$$P_R = \frac{F(\sin \lambda + f \cos \lambda)}{\cos \lambda - f \sin \lambda} \quad (c)$$

and for lowering the load,

$$P_L = \frac{F(f \cos \lambda - \sin \lambda)}{\cos \lambda + f \sin \lambda} \quad (d)$$

Next, divide the numerator and the denominator of these equations by $\cos \lambda$ and use the relation $\tan \lambda = l/\pi d_m$ (Fig. 8–6). We then have, respectively,

$$P_R = \frac{F[(l/\pi d_m) + f]}{1 - (fl/\pi d_m)} \quad (e)$$

$$P_L = \frac{F[f - (l/\pi d_m)]}{1 + (fl/\pi d_m)} \quad (f)$$

Finally, noting that the torque is the product of the force P and the mean radius $d_m/2$, for raising the load we can write

$$T_R = \frac{F d_m}{2} \left(\frac{l + \pi f d_m}{\pi d_m - fl} \right) \quad (8-1)$$

where T_R is the torque required for two purposes: to overcome thread friction and to raise the load.

The torque required to lower the load, from Eq. (f), is found to be

$$T_L = \frac{F d_m}{2} \left(\frac{\pi f d_m - l}{\pi d_m + fl} \right) \quad (8-2)$$

This is the torque required to overcome a part of the friction in lowering the load. It may turn out, in specific instances where the lead is large or the friction is low, that the load will lower itself by causing the screw to spin without any external effort. In such cases, the torque T_L from Eq. (8–2) will be negative or zero. When a positive torque is obtained from this equation, the screw is said to be *self-locking*. Thus the condition for self-locking is

$$\pi f d_m > l$$

Now divide both sides of this inequality by πd_m . Recognizing that $l/\pi d_m = \tan \lambda$, we get

$$f > \tan \lambda \quad (8-3)$$

This relation states that self-locking is obtained whenever the coefficient of thread friction is equal to or greater than the tangent of the thread lead angle.

An expression for efficiency is also useful in the evaluation of power screws. If we let $f = 0$ in Eq. (8–1), we obtain

$$T_0 = \frac{Fl}{2\pi} \quad (g)$$

which, since thread friction has been eliminated, is the torque required only to raise the load. The efficiency is therefore

$$e = \frac{T_0}{T_R} = \frac{Fl}{2\pi T_R} \quad (8-4)$$

The preceding equations have been developed for square threads where the normal thread loads are parallel to the axis of the screw. In the case of Acme or other threads, the normal thread load is inclined to the axis because of the thread angle 2α and the lead angle λ . Since lead angles are small, this inclination can be neglected and only the effect of the thread angle (Fig. 8-7a) considered. The effect of the angle α is to increase the frictional force by the wedging action of the threads. Therefore the frictional terms in Eq. (8-1) must be divided by $\cos \alpha$. For raising the load, or for tightening a screw or bolt, this yields

$$T_R = \frac{F d_m}{2} \left(\frac{l + \pi f d_m \sec \alpha}{\pi d_m - f l \sec \alpha} \right) \quad (8-5)$$

In using Eq. (8-5), remember that it is an approximation because the effect of the lead angle has been neglected.

For power screws, the Acme thread is not as efficient as the square thread, because of the additional friction due to the wedging action, but it is often preferred because it is easier to machine and permits the use of a split nut, which can be adjusted to take up for wear.

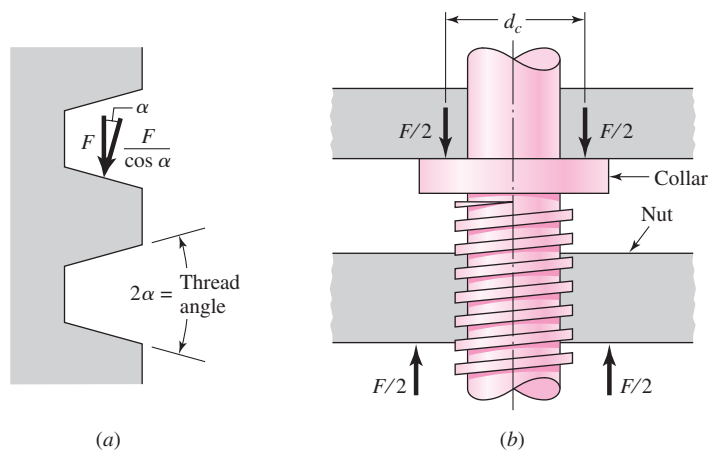
Usually a third component of torque must be applied in power-screw applications. When the screw is loaded axially, a thrust or collar bearing must be employed between the rotating and stationary members in order to carry the axial component. Figure 8-7b shows a typical thrust collar in which the load is assumed to be concentrated at the mean collar diameter d_c . If f_c is the coefficient of collar friction, the torque required is

$$T_c = \frac{F f_c d_c}{2} \quad (8-6)$$

For large collars, the torque should probably be computed in a manner similar to that employed for disk clutches.

Figure 8-7

(a) Normal thread force is increased because of angle α ;
(b) thrust collar has frictional diameter d_c .



Nominal body stresses in power screws can be related to thread parameters as follows. The maximum nominal shear stress τ in torsion of the screw body can be expressed as

$$\tau = \frac{16T}{\pi d_r^3} \quad (8-7)$$

The axial stress σ in the body of the screw due to load F is

$$\sigma = \frac{F}{A} = \frac{4F}{\pi d_r^2} \quad (8-8)$$

in the absence of column action. For a short column the J. B. Johnson buckling formula is given by Eq. (4-43), which is

$$\left(\frac{F}{A}\right)_{\text{crit}} = S_y - \left(\frac{S_y l}{2\pi k}\right)^2 \frac{1}{CE} \quad (8-9)$$

Nominal thread stresses in power screws can be related to thread parameters as follows. The bearing stress in Fig. 8-8, σ_B , is

$$\sigma_B = -\frac{F}{\pi d_m n_t p/2} = -\frac{2F}{\pi d_m n_t p} \quad (8-10)$$

where n_t is the number of engaged threads. The bending stress at the root of the thread σ_b is found from

$$\frac{I}{c} = \frac{(\pi d_r n_t)(p/2)^2}{6} = \frac{\pi}{24} d_r n_t p^2 \quad M = \frac{Fp}{4}$$

so

$$\sigma_b = \frac{M}{I/c} = \frac{Fp}{4} \frac{24}{\pi d_r n_t p^2} = \frac{6F}{\pi d_r n_t p} \quad (8-11)$$

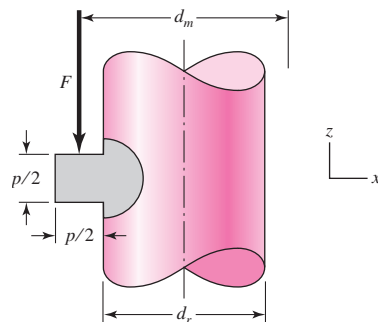
The transverse shear stress τ at the center of the root of the thread due to load F is

$$\tau = \frac{3V}{2A} = \frac{3}{2} \frac{F}{\pi d_r n_t p/2} = \frac{3F}{\pi d_r n_t p} \quad (8-12)$$

and at the top of the root it is zero. The von Mises stress σ' at the top of the root “plane” is found by first identifying the orthogonal normal stresses and the shear stresses. From

Figure 8-8

Geometry of square thread useful in finding bending and transverse shear stresses at the thread root.



the coordinate system of Fig. 8–8, we note

$$\begin{aligned}\sigma_x &= \frac{6F}{\pi d_r n_t p} & \tau_{xy} &= 0 \\ \sigma_y &= 0 & \tau_{yz} &= \frac{16T}{\pi d_r^3} \\ \sigma_z &= -\frac{4F}{\pi d_r^2} & \tau_{zx} &= 0\end{aligned}$$

then use Eq. (5–14) of Sec. 5–5.

The screw-thread form is complicated from an analysis viewpoint. Remember the origin of the tensile-stress area A_t , which comes from experiment. A power screw lifting a load is in compression and its thread pitch is *shortened* by elastic deformation. Its engaging nut is in tension and its thread pitch is *lengthened*. The engaged threads cannot share the load equally. Some experiments show that the first engaged thread carries 0.38 of the load, the second 0.25, the third 0.18, and the seventh is free of load. In estimating thread stresses by the equations above, substituting $0.38F$ for F and setting n_t to 1 will give the largest level of stresses in the thread-nut combination.

EXAMPLE 8–1

A square-thread power screw has a major diameter of 32 mm and a pitch of 4 mm with double threads, and it is to be used in an application similar to that in Fig. 8–4. The given data include $f = f_c = 0.08$, $d_c = 40$ mm, and $F = 6.4$ kN per screw.

- Find the thread depth, thread width, pitch diameter, minor diameter, and lead.
- Find the torque required to raise and lower the load.
- Find the efficiency during lifting the load.
- Find the body stresses, torsional and compressive.
- Find the bearing stress.
- Find the thread stresses bending at the root, shear at the root, and von Mises stress and maximum shear stress at the same location.

Solution

(a) From Fig. 8–3a the thread depth and width are the same and equal to half the pitch, or 2 mm. Also

$$d_m = d - p/2 = 32 - 4/2 = 30 \text{ mm}$$

Answer

$$d_r = d - p = 32 - 4 = 28 \text{ mm}$$

$$l = np = 2(4) = 8 \text{ mm}$$

(b) Using Eqs. (8–1) and (8–6), the torque required to turn the screw against the load is

$$\begin{aligned}T_R &= \frac{F d_m}{2} \left(\frac{l + \pi f d_m}{\pi d_m - fl} \right) + \frac{F f_c d_c}{2} \\ &= \frac{6.4(30)}{2} \left[\frac{8 + \pi(0.08)(30)}{\pi(30) - 0.08(8)} \right] + \frac{6.4(0.08)40}{2}\end{aligned}$$

Answer

$$= 15.94 + 10.24 = 26.18 \text{ N} \cdot \text{m}$$

Using Eqs. (8–2) and (8–6), we find the load-lowering torque is

$$T_L = \frac{Fd_m}{2} \left(\frac{\pi f d_m - l}{\pi d_m + fl} \right) + \frac{Ff_c d_c}{2}$$

$$= \frac{6.4(30)}{2} \left[\frac{\pi(0.08)30 - 8}{\pi(30) + 0.08(8)} \right] + \frac{6.4(0.08)(40)}{2}$$

Answer $= -0.466 + 10.24 = 9.77 \text{ N} \cdot \text{m}$

The minus sign in the first term indicates that the screw alone is not self-locking and would rotate under the action of the load except for the fact that the collar friction is present and must be overcome, too. Thus the torque required to rotate the screw “with” the load is less than is necessary to overcome collar friction alone.

(c) The overall efficiency in raising the load is

Answer $e = \frac{Fl}{2\pi T_R} = \frac{6.4(8)}{2\pi(26.18)} = 0.311$

(d) The body shear stress τ due to torsional moment T_R at the outside of the screw body is

Answer $\tau = \frac{16T_R}{\pi d_r^3} = \frac{16(26.18)(10^3)}{\pi(28^3)} = 6.07 \text{ MPa}$

The axial nominal normal stress σ is

Answer $\sigma = -\frac{4F}{\pi d_r^2} = -\frac{4(6.4)10^3}{\pi(28^2)} = -10.39 \text{ MPa}$

(e) The bearing stress σ_B is, with one thread carrying $0.38F$,

Answer $\sigma_B = -\frac{2(0.38F)}{\pi d_m(1)p} = -\frac{2(0.38)(6.4)10^3}{\pi(30)(1)(4)} = -12.9 \text{ MPa}$

(f) The thread-root bending stress σ_b with one thread carrying $0.38F$ is

$$\sigma_b = \frac{6(0.38F)}{\pi d_r(1)p} = \frac{6(0.38)(6.4)10^3}{\pi(28)(1)4} = 41.5 \text{ MPa}$$

The transverse shear at the extreme of the root cross section due to bending is zero. However, there is a circumferential shear stress at the extreme of the root cross section of the thread as shown in part (d) of 6.07 MPa. The three-dimensional stresses, after Fig. 8–8, noting the y coordinate is into the page, are

$$\begin{aligned} \sigma_x &= 41.5 \text{ MPa} & \tau_{xy} &= 0 \\ \sigma_y &= 0 & \tau_{yz} &= 6.07 \text{ MPa} \\ \sigma_z &= -10.39 \text{ MPa} & \tau_{zx} &= 0 \end{aligned}$$

Equation (5–14) of Sec. 5–5 can be written as

Answer $\sigma' = \frac{1}{\sqrt{2}} \{ (41.5 - 0)^2 + [0 - (-10.39)]^2 + (-10.39 - 41.5)^2 + 6(6.07)^2 \}^{1/2}$

$$= 48.7 \text{ MPa}$$

Alternatively, you can determine the principal stresses and then use Eq. (5–12) to find the von Mises stress. This would prove helpful in evaluating τ_{\max} as well. The principal stresses can be found from Eq. (3–15); however, sketch the stress element and note that there are no shear stresses on the x face. This means that σ_x is a principal stress. The remaining stresses can be transformed by using the plane stress equation, Eq. (3–13). Thus, the remaining principal stresses are

$$\frac{-10.39}{2} \pm \sqrt{\left(\frac{-10.39}{2}\right)^2 + 6.07^2} = 2.79, -13.18 \text{ MPa}$$

Ordering the principal stresses gives $\sigma_1, \sigma_2, \sigma_3 = 41.5, 2.79, -13.18$ MPa. Substituting these into Eq. (5–12) yields

Answer
$$\sigma' = \left\{ \frac{[41.5 - 2.79]^2 + [2.79 - (-13.18)]^2 + [-13.18 - 41.5]^2}{2} \right\}^{1/2}$$

$$= 48.7 \text{ MPa}$$

The maximum shear stress is given by Eq. (3–16), where $\tau_{\max} = \tau_{1/3}$, giving

Answer
$$\tau_{\max} = \frac{\sigma_1 - \sigma_3}{2} = \frac{41.5 - (-13.18)}{2} = 27.3 \text{ MPa}$$

Table 8–4

Screw Bearing

Pressure p_b

Source: H. A. Rothbart,
*Mechanical Design and
Systems Handbook*, 2nd ed.,
McGraw-Hill, New York,
1985.

Screw Material	Nut Material	Safe p_b , psi	Notes
Steel	Bronze	2500–3500	Low speed
Steel	Bronze	1600–2500	10 fpm
	Cast iron	1800–2500	8 fpm
Steel	Bronze	800–1400	20–40 fpm
	Cast iron	600–1000	20–40 fpm
Steel	Bronze	150–240	50 fpm

Ham and Ryan¹ showed that the coefficient of friction in screw threads is independent of axial load, practically independent of speed, decreases with heavier lubricants, shows little variation with combinations of materials, and is best for steel on bronze. Sliding coefficients of friction in power screws are about 0.10–0.15.

Table 8–4 shows safe bearing pressures on threads, to protect the moving surfaces from abnormal wear. Table 8–5 shows the coefficients of sliding friction for common material pairs. Table 8–6 shows coefficients of starting and running friction for common material pairs.

¹Ham and Ryan, *An Experimental Investigation of the Friction of Screw-threads*, Bulletin 247, University of Illinois Experiment Station, Champaign-Urbana, Ill., June 7, 1932.

Table 8–5

Coefficients of Friction f
for Threaded Pairs

Source: H. A. Rothbart,
*Mechanical Design and
Systems Handbook*, 2nd ed.,
McGraw-Hill, New York,
1985.

Screw Material	Nut Material			
	Steel	Bronze	Brass	Cast Iron
Steel, dry	0.15–0.25	0.15–0.23	0.15–0.19	0.15–0.25
Steel, machine oil	0.11–0.17	0.10–0.16	0.10–0.15	0.11–0.17
Bronze	0.08–0.12	0.04–0.06	—	0.06–0.09

Table 8–6

Thrust-Collar Friction
Coefficients

Source: H. A. Rothbart,
*Mechanical Design and
Systems Handbook*, 2nd ed.,
McGraw-Hill, New York,
1985.

Combination	Running	Starting
Soft steel on cast iron	0.12	0.17
Hard steel on cast iron	0.09	0.15
Soft steel on bronze	0.08	0.10
Hard steel on bronze	0.06	0.08

8–3 Threaded Fasteners

As you study the sections on threaded fasteners and their use, be alert to the stochastic and deterministic viewpoints. In most cases the threat is from overproof loading of fasteners, and this is best addressed by statistical methods. The threat from fatigue is lower, and deterministic methods can be adequate.

Figure 8–9 is a drawing of a standard hexagon-head bolt. Points of stress concentration are at the fillet, at the start of the threads (runout), and at the thread-root fillet in the plane of the nut when it is present. See Table A–29 for dimensions. The diameter of the washer face is the same as the width across the flats of the hexagon. The thread length of inch-series bolts, where d is the nominal diameter, is

$$L_T = \begin{cases} 2d + \frac{1}{4} \text{ in} & L \leq 6 \text{ in} \\ 2d + \frac{1}{2} \text{ in} & L > 6 \text{ in} \end{cases} \quad (8-13)$$

and for metric bolts is

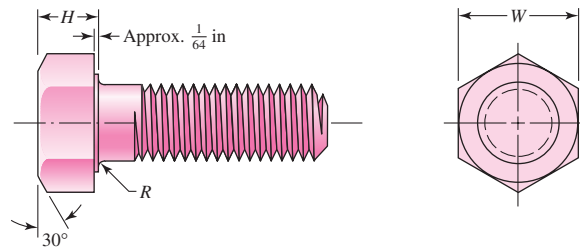
$$L_T = \begin{cases} 2d + 6 & L \leq 125 & d \leq 48 \\ 2d + 12 & 125 < L \leq 200 \\ 2d + 25 & L > 200 \end{cases} \quad (8-14)$$

where the dimensions are in millimeters. The ideal bolt length is one in which only one or two threads project from the nut after it is tightened. Bolt holes may have burrs or sharp edges after drilling. These could bite into the fillet and increase stress concentration. Therefore, washers must always be used under the bolt head to prevent this. They should be of hardened steel and loaded onto the bolt so that the rounded edge of the stamped hole faces the washer face of the bolt. Sometimes it is necessary to use washers under the nut too.

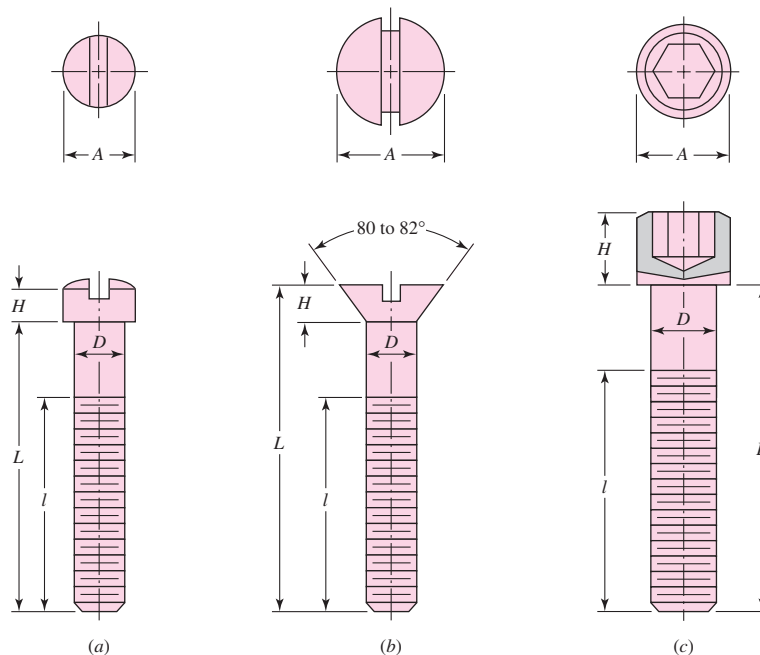
The purpose of a bolt is to clamp two or more parts together. The clamping load stretches or elongates the bolt; the load is obtained by twisting the nut until the bolt has elongated almost to the elastic limit. If the nut does not loosen, this bolt tension

Figure 8-9

Hexagon-head bolt; note the washer face, the fillet under the head, the start of threads, and the chamfer on both ends. Bolt lengths are always measured from below the head.

**Figure 8-10**

Typical cap-screw heads: (a) fillister head; (b) flat head; (c) hexagonal socket head. Cap screws are also manufactured with hexagonal heads similar to the one shown in Fig. 8-9, as well as a variety of other head styles. This illustration uses one of the conventional methods of representing threads.



remains as the preload or clamping force. When tightening, the mechanic should, if possible, hold the bolt head stationary and twist the nut; in this way the bolt shank will not feel the thread-friction torque.

The head of a hexagon-head cap screw is slightly thinner than that of a hexagon-head bolt. Dimensions of hexagon-head cap screws are listed in Table A-30. Hexagon-head cap screws are used in the same applications as bolts and also in applications in which one of the clamped members is threaded. Three other common cap-screw head styles are shown in Fig. 8-10.

A variety of machine-screw head styles are shown in Fig. 8-11. Inch-series machine screws are generally available in sizes from No. 0 to about $\frac{3}{8}$ in.

Several styles of hexagonal nuts are illustrated in Fig. 8-12; their dimensions are given in Table A-31. The material of the nut must be selected carefully to match that of the bolt. During tightening, the first thread of the nut tends to take the entire load; but yielding occurs, with some strengthening due to the cold work that takes place, and the load is eventually divided over about three nut threads. For this reason you should never reuse nuts; in fact, it can be dangerous to do so.

Figure 8-11

Types of heads used on machine screws.

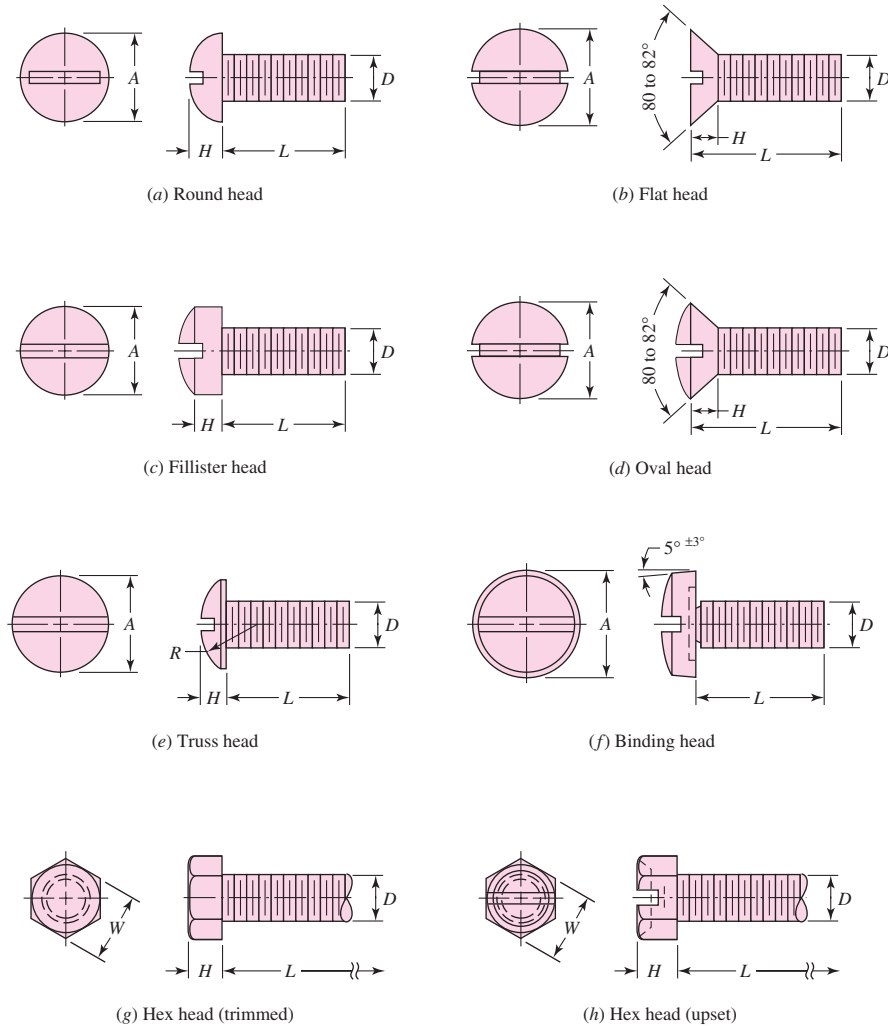
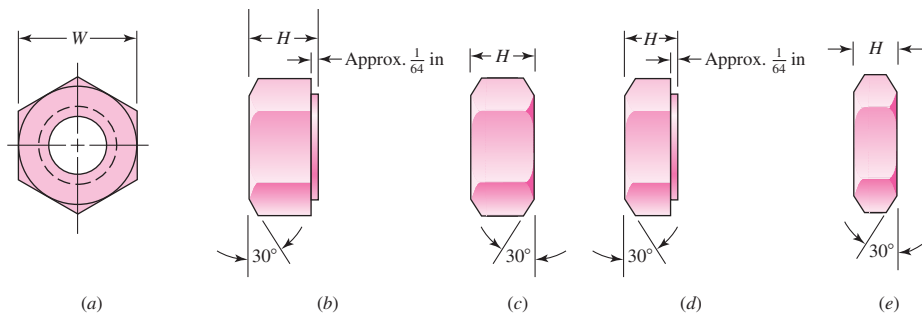


Figure 8-12

Hexagonal nuts: (a) end view, general; (b) washer-faced regular nut; (c) regular nut chamfered on both sides; (d) jam nut with washer face; (e) jam nut chamfered on both sides.

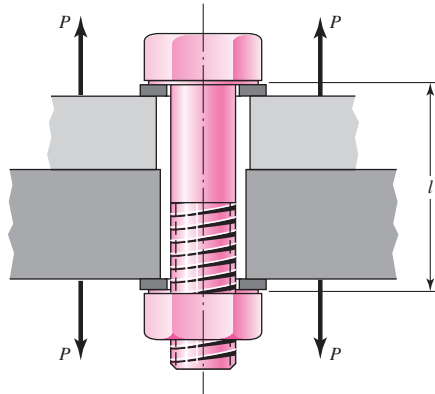


8-4 Joints—Fastener Stiffness

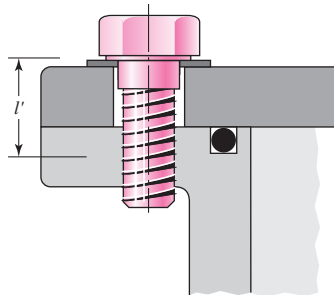
When a connection is desired that can be disassembled without destructive methods and that is strong enough to resist external tensile loads, moment loads, and shear loads, or a combination of these, then the simple bolted joint using hardened-steel washers is a good solution. Such a joint can also be dangerous unless it is properly designed and assembled by a *trained* mechanic.

Figure 8-13

A bolted connection loaded in tension by the forces P . Note the use of two washers. Note how the threads extend into the body of the connection. This is usual and is desired. l is the grip of the connection.

**Figure 8-14**

Section of cylindrical pressure vessel. Hexagon-head cap screws are used to fasten the cylinder head to the body. Note the use of an O-ring seal. l' is the effective grip of the connection (see Table 8-7).



A section through a tension-loaded bolted joint is illustrated in Fig. 8-13. Notice the clearance space provided by the bolt holes. Notice, too, how the bolt threads extend into the body of the connection.

As noted previously, the purpose of the bolt is to clamp the two, or more, parts together. Twisting the nut stretches the bolt to produce the clamping force. This clamping force is called the *pretension* or *bolt preload*. It exists in the connection after the nut has been properly tightened no matter whether the external tensile load P is exerted or not.

Of course, since the members are being clamped together, the clamping force that produces tension in the bolt induces compression in the members.

Figure 8-14 shows another tension-loaded connection. This joint uses cap screws threaded into one of the members. An alternative approach to this problem (of not using a nut) would be to use studs. A stud is a rod threaded on both ends. The stud is screwed into the lower member first; then the top member is positioned and fastened down with hardened washers and nuts. The studs are regarded as permanent, and so the joint can be disassembled merely by removing the nut and washer. Thus the threaded part of the lower member is not damaged by reusing the threads.

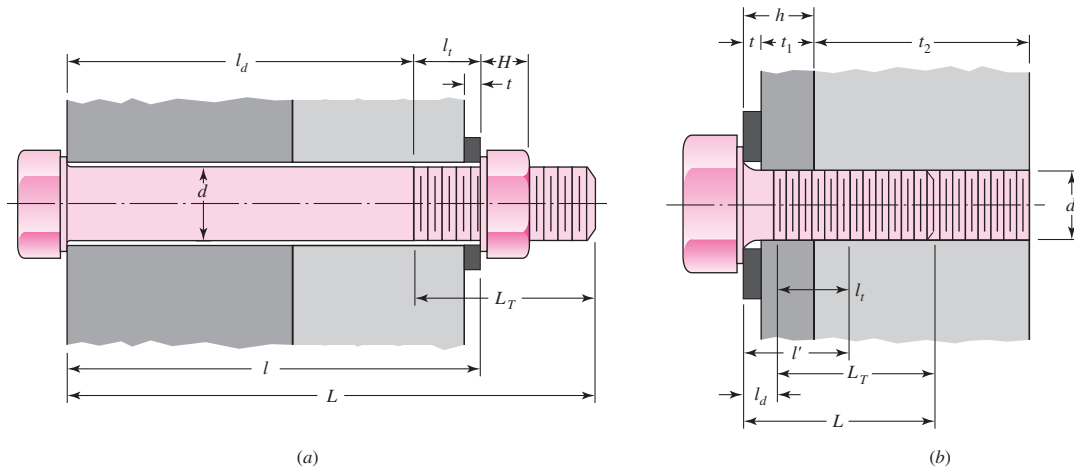
The *spring rate* is a limit as expressed in Eq. (4-1). For an elastic member such as a bolt, as we learned in Eq. (4-2), it is the ratio between the force applied to the member and the deflection produced by that force. We can use Eq. (4-4) and the results of Prob. 4-1 to find the stiffness constant of a fastener in any bolted connection.

The *grip* l of a connection is the total thickness of the clamped material. In Fig. 8-13 the grip is the sum of the thicknesses of both members and both washers. In Fig. 8-14 the effective grip is given in Table 8-7.

The stiffness of the portion of a bolt or screw within the clamped zone will generally consist of two parts, that of the unthreaded shank portion and that of the

Table 8-7

Suggested Procedure for Finding Fastener Stiffness



(a)

(b)

Given fastener diameter d
and pitch p or number of threads

Effective grip

Grip is thickness l

Washer thickness from
Table A-32 or A-33
Threaded length l_T
Inch series:

$$l_T = \begin{cases} 2d + \frac{1}{4} \text{ in}, & L \leq 6 \text{ in} \\ 2d + \frac{1}{2} \text{ in}, & L > 6 \text{ in} \end{cases}$$

Metric series:

$$l_T = \begin{cases} 2d + 6 \text{ mm}, & L \leq 125, d \leq 48 \text{ mm} \\ 2d + 12 \text{ mm}, & 125 < L \leq 200 \text{ mm} \\ 2d + 25 \text{ mm}, & L > 200 \text{ mm} \end{cases}$$

Fastener length: $L > l + H$

Fastener length: $L > h + 1.5d$

Length of useful unthreaded
portion: $l_d = L - l_T$
Length of threaded portion:
 $l_t = l - l_d$

Round up using Table A-17*

Length of useful unthreaded
portion: $l_d = L - l_T$
Length of useful threaded
portion: $l_t = l' - l_d$

Area of unthreaded portion:

$$A_d = \pi d^2/4$$

Area of threaded portion:

A_t , Table 8-1 or 8-2

Fastener stiffness:

$$k_b = \frac{A_d A_t E}{A_d l_t + A_t l_d}$$

*Bolts and cap screws may not be available in all the preferred lengths listed in Table A-17. Large fasteners may not be available in fractional inches or in millimeter lengths ending in a nonzero digit. Check with your bolt supplier for availability.

threaded portion. Thus the stiffness constant of the bolt is equivalent to the stiffnesses of two springs in series. Using the results of Prob. 4–1, we find

$$\frac{1}{k} = \frac{1}{k_1} + \frac{1}{k_2} \quad \text{or} \quad k = \frac{k_1 k_2}{k_1 + k_2} \quad (8-15)$$

for two springs in series. From Eq. (4–4), the spring rates of the threaded and unthreaded portions of the bolt in the clamped zone are, respectively,

$$k_t = \frac{A_t E}{l_t} \quad k_d = \frac{A_d E}{l_d} \quad (8-16)$$

where A_t = tensile-stress area (Tables 8–1, 8–2)

l_t = length of threaded portion of grip

A_d = major-diameter area of fastener

l_d = length of unthreaded portion in grip

Substituting these stiffnesses in Eq. (8–15) gives

$$k_b = \frac{A_d A_t E}{A_d l_t + A_t l_d} \quad (8-17)$$

where k_b is the estimated effective stiffness of the bolt or cap screw in the clamped zone. For short fasteners, the one in Fig. 8–14, for example, the unthreaded area is small and so the first of the expressions in Eq. (8–16) can be used to find k_b . For long fasteners, the threaded area is relatively small, and so the second expression in Eq. (8–16) can be used. Table 8–7 is useful.

8–5 Joints—Member Stiffness

In the previous section, we determined the stiffness of the fastener in the clamped zone. In this section, we wish to study the stiffnesses of the members in the clamped zone. Both of these stiffnesses must be known in order to learn what happens when the assembled connection is subjected to an external tensile loading.

There may be more than two members included in the grip of the fastener. All together these act like compressive springs in series, and hence the total spring rate of the members is

$$\frac{1}{k_m} = \frac{1}{k_1} + \frac{1}{k_2} + \frac{1}{k_3} + \cdots + \frac{1}{k_i} \quad (8-18)$$

If one of the members is a soft gasket, its stiffness relative to the other members is usually so small that for all practical purposes the others can be neglected and only the gasket stiffness used.

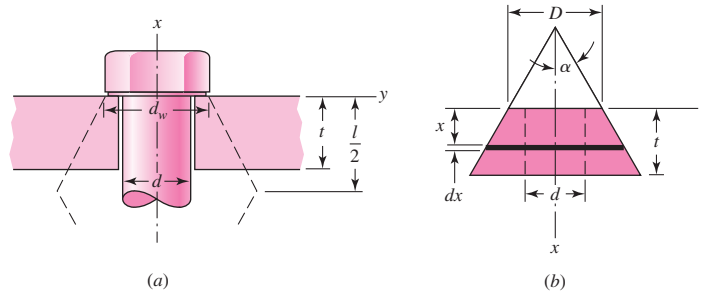
If there is no gasket, the stiffness of the members is rather difficult to obtain, except by experimentation, because the compression spreads out between the bolt head and the nut and hence the area is not uniform. There are, however, some cases in which this area can be determined.

Ito² has used ultrasonic techniques to determine the pressure distribution at the member interface. The results show that the pressure stays high out to about 1.5 bolt radii.

²Y. Ito, J. Toyoda, and S. Nagata, "Interface Pressure Distribution in a Bolt-Flange Assembly," ASME paper no. 77-WA/DE-11, 1977.

Figure 8-15

Compression of a member with the equivalent elastic properties represented by a frustum of a hollow cone. Here, l represents the grip length.



The pressure, however, falls off farther away from the bolt. Thus Ito suggests the use of Rotscher's pressure-cone method for stiffness calculations with a variable cone angle. This method is quite complicated, and so here we choose to use a simpler approach using a fixed cone angle.

Figure 8–15 illustrates the general cone geometry using a half-apex angle α . An angle $\alpha = 45^\circ$ has been used, but Little³ reports that this overestimates the clamping stiffness. When loading is restricted to a washer-face annulus (hardened steel, cast iron, or aluminum), the proper apex angle is smaller. Osgood⁴ reports a range of $25^\circ \leq \alpha \leq 33^\circ$ for most combinations. In this book we shall use $\alpha = 30^\circ$ except in cases in which the material is insufficient to allow the frusta to exist.

Referring now to Fig. 8–15*b*, the contraction of an element of the cone of thickness dx subjected to a compressive force P is, from Eq. (4–3),

$$d\delta = \frac{P dx}{EA} \quad (a)$$

The area of the element is

$$\begin{aligned} A &= \pi(r_o^2 - r_i^2) = \pi \left[\left(x \tan \alpha + \frac{D}{2} \right)^2 - \left(\frac{d}{2} \right)^2 \right] \\ &= \pi \left(x \tan \alpha + \frac{D+d}{2} \right) \left(x \tan \alpha + \frac{D-d}{2} \right) \end{aligned} \quad (b)$$

Substituting this in Eq. (a) and integrating gives a total contraction of

$$\delta = \frac{P}{\pi E} \int_0^l \frac{dx}{[x \tan \alpha + (D+d)/2][x \tan \alpha + (D-d)/2]} \quad (c)$$

Using a table of integrals, we find the result to be

$$\delta = \frac{P}{\pi E d \tan \alpha} \ln \frac{(2t \tan \alpha + D - d)(D + d)}{(2t \tan \alpha + D + d)(D - d)} \quad (d)$$

Thus the spring rate or stiffness of this frustum is

$$k = \frac{P}{\delta} = \frac{\pi E d \tan \alpha}{\ln \frac{(2t \tan \alpha + D - d)(D + d)}{(2t \tan \alpha + D + d)(D - d)}} \quad (8-19)$$

³R. E. Little, "Bolted Joints: How Much Give?" *Machine Design*, Nov. 9, 1967.

⁴C. C. Osgood, "Saving Weight on Bolted Joints," *Machine Design*, Oct. 25, 1979.

With $\alpha = 30^\circ$, this becomes

$$k = \frac{0.5774\pi Ed}{\ln \frac{(1.155t + D - d)(D + d)}{(1.155t + D + d)(D - d)}} \quad (8-20)$$

Equation (8–20), or (8–19), must be solved separately for each frustum in the joint. Then individual stiffnesses are assembled to obtain k_m using Eq. (8–18).

If the members of the joint have the same Young's modulus E with symmetrical frusta back to back, then they act as two identical springs in series. From Eq. (8–18) we learn that $k_m = k/2$. Using the grip as $l = 2t$ and d_w as the diameter of the washer face, we find the spring rate of the members to be

$$k_m = \frac{\pi Ed \tan \alpha}{2 \ln \frac{(l \tan \alpha + d_w - d)(d_w + d)}{(l \tan \alpha + d_w + d)(d_w - d)}} \quad (8-21)$$

The diameter of the washer face is about 50 percent greater than the fastener diameter for standard hexagon-head bolts and cap screws. Thus we can simplify Eq. (8–21) by letting $d_w = 1.5d$. If we also use $\alpha = 30^\circ$, then Eq. (8–21) can be written as

$$k_m = \frac{0.5774\pi Ed}{2 \ln \left(5 \frac{0.5774l + 0.5d}{0.5774l + 2.5d} \right)} \quad (8-22)$$

It is easy to program the numbered equations in this section, and you should do so. The time spent in programming will save many hours of formula plugging.

To see how good Eq. (8–21) is, solve it for k_m/Ed :

$$\frac{k_m}{Ed} = \frac{\pi \tan \alpha}{2 \ln \left[\frac{(l \tan \alpha + d_w - d)(d_w + d)}{(l \tan \alpha + d_w + d)(d_w - d)} \right]}$$

Earlier in the section use of $\alpha = 30^\circ$ was recommended for hardened steel, cast iron, or aluminum members. Wileman, Choudury, and Green⁵ conducted a finite element study of this problem. The results, which are depicted in Fig. 8–16, agree with the $\alpha = 30^\circ$ recommendation, coinciding exactly at the aspect ratio $d/l = 0.4$. Additionally, they offered an exponential curve-fit of the form

$$\frac{k_m}{Ed} = A \exp(Bd/l) \quad (8-23)$$

with constants A and B defined in Table 8–8. For standard washer faces and members of the same material, Eq. (8–23) offers a simple calculation for member stiffness k_m . For departure from these conditions, Eq. (8–20) remains the basis for approaching the problem.

⁵J. Wileman, M. Choudury, and I. Green, "Computation of Member Stiffness in Bolted Connections," *Trans. ASME, J. Mech. Design*, vol. 113, December 1991, pp. 432–437.

Figure 8-16

The dimensionless plot of stiffness versus aspect ratio of the members of a bolted joint, showing the relative accuracy of methods of Rotscher, Mischke, and Motosh, compared to a finite-element analysis (FEA) conducted by Wileman, Choudury, and Green.

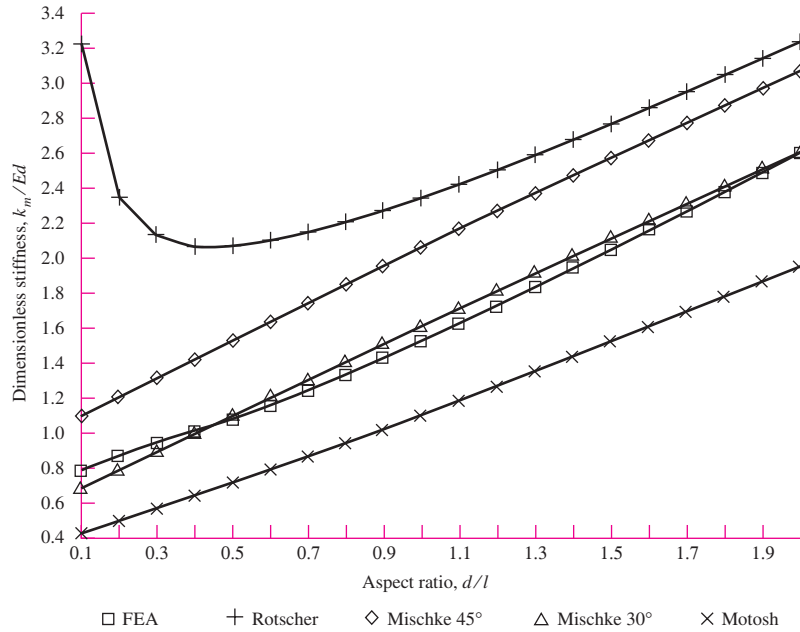


Table 8-8

Stiffness Parameters
of Various Member
Materials†

†Source: J. Wileman, M. Choudury, and I. Green, "Computation of Member Stiffness in Bolted Connections," *Trans. ASME, J. Mech. Design*, vol. 113, December 1991, pp. 432–437.

Material Used	Poisson Ratio	Elastic GPa	Modulus Mpsi	A	B
Steel	0.291	207	30.0	0.787 15	0.628 73
Aluminum	0.334	71	10.3	0.796 70	0.638 16
Copper	0.326	119	17.3	0.795 68	0.635 53
Gray cast iron	0.211	100	14.5	0.778 71	0.616 16
General expression				0.789 52	0.629 14

EXAMPLE 8-2

Two $\frac{1}{2}$ -in-thick steel plates with a modulus of elasticity of $30(10^6)$ psi are clamped by washer-faced $\frac{1}{2}$ -in-diameter UNC SAE grade 5 bolts with a 0.095-in-thick washer under the nut. Find the member spring rate k_m using the method of conical frusta, and compare the result with the finite element analysis (FEA) curve-fit method of Wileman et al.

Solution

The grip is $0.5 + 0.5 + 0.095 = 1.095$ in. Using Eq. (8-22) with $l = 1.095$ and $d = 0.5$ in, we write

$$k_m = \frac{0.5774\pi 30(10^6)0.5}{2 \ln \left[5 \frac{0.5774(1.095) + 0.5(0.5)}{0.5774(1.095) + 2.5(0.5)} \right]} = 15.97(10^6) \text{ lbf/in}$$

From Table 8–8, $A = 0.787\ 15$, $B = 0.628\ 73$. Equation (8–23) gives

$$\begin{aligned} k_m &= 30(10^6)(0.5)(0.787\ 15) \exp[0.628\ 73(0.5)/1.095] \\ &= 15.73(10^6) \text{ lbf/in} \end{aligned}$$

For this case, the difference between the results for Eqs. (8–22) and (8–23) is less than 2 percent.

8–6 Bolt Strength

In the specification standards for bolts, the strength is specified by stating ASTM minimum quantities, the *minimum proof strength*, or *minimum proof load*, and the *minimum tensile strength*.

The *proof load* is the maximum load (force) that a bolt can withstand without acquiring a permanent set. The *proof strength* is the quotient of the proof load and the tensile-stress area. The proof strength thus corresponds roughly to the proportional limit and corresponds to 0.0001 in permanent set in the fastener (first measurable deviation from elastic behavior). The value of the mean proof strength, the mean tensile strength, and the corresponding standard deviations are not part of the specification codes, so it is the designer's responsibility to obtain these values, perhaps by laboratory testing, before designing to a reliability specification. Figure 8–17 shows the distribution of ultimate tensile strength from a bolt production run. If the ASTM minimum strength equals or exceeds 120 kpsi, the bolts can be offered as SAE grade 5. The designer does not see this histogram. Instead, in Table 8–9, the designer sees the entry $S_{ut} = 120$ kpsi under the $\frac{1}{4}$ -1-in size in grade 5 bolts. Similarly, minimum strengths are shown in Tables 8–10 and 8–11.

The SAE specifications are found in Table 8–9. The bolt grades are numbered according to the tensile strengths, with decimals used for variations at the same strength level. Bolts and screws are available in all grades listed. Studs are available in grades 1, 2, 4, 5, 8, and 8.1. Grade 8.1 is not listed.

Figure 8–17

Histogram of bolt ultimate tensile strength based on 539 tests displaying a mean ultimate tensile strength $\bar{S}_{ut} = 145.1$ kpsi and a standard deviation of $\hat{\sigma}_{S_{ut}} = 10.3$ kpsi.

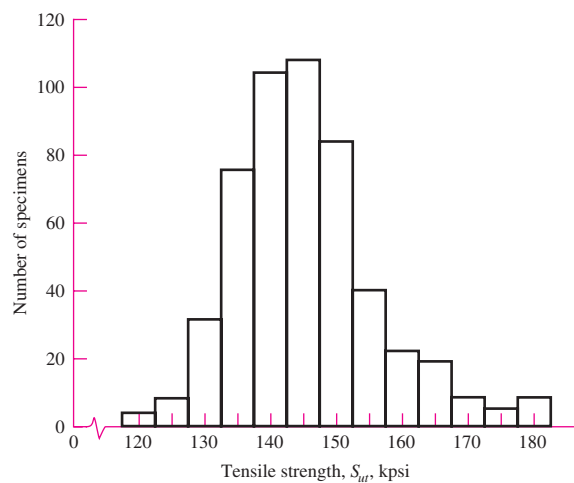










Table 8–9

SAE Specifications for Steel Bolts

SAE Grade No.	Size Range Inclusive, in	Minimum Proof Strength,* kpsi	Minimum Tensile Strength,* kpsi	Minimum Yield Strength,* kpsi	Material	Head Marking
1	$\frac{1}{4}$ – $1\frac{1}{2}$	33	60	36	Low or medium carbon	
2	$\frac{1}{4}$ – $\frac{3}{4}$	55	74	57	Low or medium carbon	
	$\frac{7}{8}$ – $1\frac{1}{2}$	33	60	36		
4	$\frac{1}{4}$ – $1\frac{1}{2}$	65	115	100	Medium carbon, cold-drawn	
5	$\frac{1}{4}$ –1	85	120	92	Medium carbon, Q&T	
	$1\frac{1}{8}$ – $1\frac{1}{2}$	74	105	81		
5.2	$\frac{1}{4}$ –1	85	120	92	Low-carbon martensite, Q&T	
7	$\frac{1}{4}$ – $1\frac{1}{2}$	105	133	115	Medium-carbon alloy, Q&T	
8	$\frac{1}{4}$ – $1\frac{1}{2}$	120	150	130	Medium-carbon alloy, Q&T	
8.2	$\frac{1}{4}$ –1	120	150	130	Low-carbon martensite, Q&T	

*Minimum strengths are strengths exceeded by 99 percent of fasteners.

ASTM specifications are listed in Table 8–10. ASTM threads are shorter because ASTM deals mostly with structures; structural connections are generally loaded in shear, and the decreased thread length provides more shank area.










Specifications for metric fasteners are given in Table 8–11.

It is worth noting that all specification-grade bolts made in this country bear a manufacturer's mark or logo, in addition to the grade marking, on the bolt head. Such marks confirm that the bolt meets or exceeds specifications. If such marks are missing, the bolt may be imported; for imported bolts there is no obligation to meet specifications.

Bolts in fatigue axial loading fail at the fillet under the head, at the thread runout, and at the first thread engaged in the nut. If the bolt has a standard shoulder under

Table 8-10








ASTM Specifications for Steel Bolts

ASTM Designation No.	Size Range, Inclusive, in	Minimum Proof Strength,* kpsi	Minimum Tensile Strength,* kpsi	Minimum Yield Strength,* kpsi	Material	Head Marking
A307	$\frac{1}{4}$ – $1\frac{1}{2}$	33	60	36	Low carbon	
A325, type 1	$\frac{1}{2}$ –1 $1\frac{1}{8}$ – $1\frac{1}{2}$	85 74	120 105	92 81	Medium carbon, Q&T	
A325, type 2	$\frac{1}{2}$ –1 $1\frac{1}{8}$ – $1\frac{1}{2}$	85 74	120 105	92 81	Low-carbon, martensite, Q&T	
A325, type 3	$\frac{1}{2}$ –1 $1\frac{1}{8}$ – $1\frac{1}{2}$	85 74	120 105	92 81	Weathering steel, Q&T	
A354, grade BC	$\frac{1}{4}$ – $2\frac{1}{2}$ $2\frac{3}{4}$ –4	105 95	125 115	109 99	Alloy steel, Q&T	
A354, grade BD	$\frac{1}{4}$ –4	120	150	130	Alloy steel, Q&T	
A449	$\frac{1}{4}$ –1 $1\frac{1}{8}$ – $1\frac{1}{2}$ $1\frac{3}{4}$ –3	85 74 55	120 105 90	92 81 58	Medium-carbon, Q&T	
A490, type 1	$\frac{1}{2}$ – $1\frac{1}{2}$	120	150	130	Alloy steel, Q&T	
A490, type 3	$\frac{1}{2}$ – $1\frac{1}{2}$	120	150	130	Weathering steel, Q&T	

*Minimum strengths are strengths exceeded by 99 percent of fasteners.

Table 8-11

Metric Mechanical-Property Classes for Steel Bolts, Screws, and Studs*

Property Class	Size Range, Inclusive	Minimum Proof Strength,† MPa	Minimum Tensile Strength,† MPa	Minimum Yield Strength,† MPa	Material	Head Marking
4.6	M5–M36	225	400	240	Low or medium carbon	
4.8	M1.6–M16	310	420	340	Low or medium carbon	
5.8	M5–M24	380	520	420	Low or medium carbon	
8.8	M16–M36	600	830	660	Medium carbon, Q&T	
9.8	M1.6–M16	650	900	720	Medium carbon, Q&T	
10.9	M5–M36	830	1040	940	Low-carbon martensite, Q&T	
12.9	M1.6–M36	970	1220	1100	Alloy, Q&T	

*The thread length for bolts and cap screws is

$$L_T = \begin{cases} 2d + 6 & L \leq 125 \\ 2d + 12 & 125 < L \leq 200 \\ 2d + 25 & L > 200 \end{cases}$$

where L is the bolt length. The thread length for structural bolts is slightly shorter than given above.

† Minimum strengths are strength exceeded by 99 percent of fasteners.

the head, it has a value of K_f from 2.1 to 2.3, and this shoulder fillet is protected from scratching or scoring by a washer. If the thread runout has a 15° or less half-cone angle, the stress is higher at the first engaged thread in the nut. Bolts are sized by examining the loading at the plane of the washer face of the nut. This is the weakest part of the bolt *if and only if* the conditions above are satisfied (washer protection of the shoulder fillet and thread runout $\leq 15^\circ$). Inattention to this requirement has led to a record of 15 percent fastener fatigue failure under the head, 20 percent at thread runout, and 65 percent where the designer is focusing attention. It does little good to concentrate on the plane of the nut washer face if it is not the weakest location.

Nuts are graded so that they can be mated with their corresponding grade of bolt. The purpose of the nut is to have its threads deflect to distribute the load of the bolt more evenly to the nut. The nut's properties are controlled in order to accomplish this. The grade of the nut should be the grade of the bolt.

8-7 Tension Joints—The External Load

Let us now consider what happens when an external tensile load P , as in Fig. 8-13, is applied to a bolted connection. It is to be assumed, of course, that the clamping force, which we will call the *preload* F_i , has been correctly applied by tightening the nut *before* P is applied. The nomenclature used is:

F_i = preload

P = external tensile load

P_b = portion of P taken by bolt

P_m = portion of P taken by members

$F_b = P_b + F_i$ = resultant bolt load

$F_m = P_m - F_i$ = resultant load on members

C = fraction of external load P carried by bolt

$1 - C$ = fraction of external load P carried by members

The load P is tension, and it causes the connection to stretch, or elongate, through some distance δ . We can relate this elongation to the stiffnesses by recalling that k is the force divided by the deflection. Thus

$$\delta = \frac{P_b}{k_b} \quad \text{and} \quad \delta = \frac{P_m}{k_m} \quad (a)$$

or

$$P_m = P_b \frac{k_m}{k_b} \quad (b)$$

Since $P = P_b + P_m$, we have

$$P_b = \frac{k_b P}{k_b + k_m} = C P \quad (c)$$

and

$$P_m = P - P_b = (1 - C)P \quad (d)$$

where

$$C = \frac{k_b}{k_b + k_m} \quad (e)$$

is called the *stiffness constant of the joint*. The resultant bolt load is

$$F_b = P_b + F_i = C P + F_i \quad F_m < 0 \quad (8-24)$$

Table 8–12

Computation of Bolt and Member Stiffnesses. Steel members clamped using a $\frac{1}{2}$ -in-13 NC steel bolt. $C = \frac{k_b}{k_b + k_m}$

Bolt Grip, in	Stiffnesses, M lbf/in			
	k_b	k_m	C	$1 - C$
2	2.57	12.69	0.168	0.832
3	1.79	11.33	0.136	0.864
4	1.37	10.63	0.114	0.886

and the resultant load on the connected members is

$$F_m = P_m - F_i = (1 - C)P - F_i \quad F_m < 0 \quad (8-25)$$

Of course, these results are valid only as long as some clamping load remains in the members; this is indicated by the qualifier in the equations.

Table 8–12 is included to provide some information on the relative values of the stiffnesses encountered. The grip contains only two members, both of steel, and no washers. The ratios C and $1 - C$ are the coefficients of P in Eqs. (8–24) and (8–25), respectively. They describe the proportion of the external load taken by the bolt and by the members, respectively. In all cases, the members take over 80 percent of the external load. Think how important this is when fatigue loading is present. Note also that making the grip longer causes the members to take an even greater percentage of the external load.

8–8 Relating Bolt Torque to Bolt Tension

Having learned that a high preload is very desirable in important bolted connections, we must next consider means of ensuring that the preload is actually developed when the parts are assembled.

If the overall length of the bolt can actually be measured with a micrometer when it is assembled, the bolt elongation due to the preload F_i can be computed using the formula $\delta = F_i l / (AE)$. Then the nut is simply tightened until the bolt elongates through the distance δ . This ensures that the desired preload has been attained.

The elongation of a screw cannot usually be measured, because the threaded end is often in a blind hole. It is also impractical in many cases to measure bolt elongation. In such cases the wrench torque required to develop the specified preload must be estimated. Then torque wrenching, pneumatic-impact wrenching, or the turn-of-the-nut method may be used.

The torque wrench has a built-in dial that indicates the proper torque.

With impact wrenching, the air pressure is adjusted so that the wrench stalls when the proper torque is obtained, or in some wrenches, the air automatically shuts off at the desired torque.

The turn-of-the-nut method requires that we first define the meaning of snug-tight. The *snug-tight* condition is the tightness attained by a few impacts of an impact wrench, or the full effort of a person using an ordinary wrench. When the snug-tight condition is attained, all additional turning develops useful tension in the bolt. The turn-of-the-nut method requires that you compute the fractional number of turns necessary to develop the required preload from the snug-tight condition. For example, for heavy hexagonal structural bolts, the turn-of-the-nut specification states that the nut should be turned a minimum of 180° from the snug-tight condition under optimum

Table 8-13

Distribution of Preload F_i
for 20 Tests of
Unlubricated Bolts
Torqued to 90 N · m

23.6,	27.6,	28.0,	29.4,	30.3,	30.7,	32.9,	33.8,	33.8,	33.8,
34.7,	35.6,	35.6,	37.4,	37.8,	37.8,	39.2,	40.0,	40.5,	42.7

*Mean value $\bar{F}_i = 34.3$ kN. Standard deviation, $\hat{\sigma} = 4.91$ kN.

conditions. Note that this is also about the correct rotation for the wheel nuts of a passenger car. Problems 8–15 to 8–17 illustrate the method further.

Although the coefficients of friction may vary widely, we can obtain a good estimate of the torque required to produce a given preload by combining Eqs. (8–5) and (8–6):

$$T = \frac{F_i d_m}{2} \left(\frac{l + \pi f d_m \sec \alpha}{\pi d_m - f l \sec \alpha} \right) + \frac{F_i f_c d_c}{2} \quad (a)$$

where d_m is the average of the major and minor diameters. Since $\tan \lambda = l/\pi d_m$, we divide the numerator and denominator of the first term by πd_m and get

$$T = \frac{F_i d_m}{2} \left(\frac{\tan \lambda + f \sec \alpha}{1 - f \tan \lambda \sec \alpha} \right) + \frac{F_i f_c d_c}{2} \quad (b)$$

The diameter of the washer face of a hexagonal nut is the same as the width across flats and equal to $1\frac{1}{2}$ times the nominal size. Therefore the mean collar diameter is $d_c = (d + 1.5d)/2 = 1.25d$. Equation (b) can now be arranged to give

$$T = \left[\left(\frac{d_m}{2d} \right) \left(\frac{\tan \lambda + f \sec \alpha}{1 - f \tan \lambda \sec \alpha} \right) + 0.625 f_c \right] F_i d \quad (c)$$

We now define a *torque coefficient* K as the term in brackets, and so

$$K = \left(\frac{d_m}{2d} \right) \left(\frac{\tan \lambda + f \sec \alpha}{1 - f \tan \lambda \sec \alpha} \right) + 0.625 f_c \quad (8-26)$$

Equation (c) can now be written

$$T = K F_i d \quad (8-27)$$

The coefficient of friction depends upon the surface smoothness, accuracy, and degree of lubrication. On the average, both f and f_c are about 0.15. The interesting fact about Eq. (8–26) is that $K \doteq 0.20$ for $f = f_c = 0.15$ no matter what size bolts are employed and no matter whether the threads are coarse or fine.

Blake and Kurtz have published results of numerous tests of the torquing of bolts.⁶ By subjecting their data to a statistical analysis, we can learn something about the distribution of the torque coefficients and the resulting preload. Blake and Kurtz determined the preload in quantities of unlubricated and lubricated bolts of size $\frac{1}{2}$ in-20 UNF when torqued to 800 lbf · in. This corresponds roughly to an M12 × 1.25 bolt torqued to 90 N · m. The statistical analyses of these two groups of bolts, converted to SI units, are displayed in Tables 8–13 and 8–14.

⁶J. C. Blake and H. J. Kurtz, “The Uncertainties of Measuring Fastener Preload,” *Machine Design*, vol. 37, Sept. 30, 1965, pp. 128–131.

Table 8-14

Distribution of Preload F_i for 10 Tests of Lubricated Bolts Torqued to 90 N · m

30.3,	32.5,	32.5,	32.9,	32.9,	33.8,	34.3,	34.7,	37.4,	40.5
-------	-------	-------	-------	-------	-------	-------	-------	-------	------

*Mean value, $\bar{F}_i = 34.18$ kN. Standard deviation, $\hat{\sigma} = 2.88$ kN.

Table 8-15

Torque Factors K for Use with Eq. (8-27)

Bolt Condition	K
Nonplated, black finish	0.30
Zinc-plated	0.20
Lubricated	0.18
Cadmium-plated	0.16
With Bowman Anti-Seize	0.12
With Bowman-Grip nuts	0.09

We first note that both groups have about the same mean preload, 34 kN. The unlubricated bolts have a standard deviation of 4.9 kN and a COV of about 0.15. The lubricated bolts have a standard deviation of 3 kN and a COV of about 0.9.

The means obtained from the two samples are nearly identical, approximately 34 kN; using Eq. (8-27), we find, for both samples, $K = 0.208$.

Bowman Distribution, a large manufacturer of fasteners, recommends the values shown in Table 8-15. In this book we shall use these values and use $K = 0.2$ when the bolt condition is not stated.

EXAMPLE 8-3

A $\frac{3}{4}$ in-16 UNF \times 2 $\frac{1}{2}$ in SAE grade 5 bolt is subjected to a load P of 6 kip in a tension joint. The initial bolt tension is $F_i = 25$ kip. The bolt and joint stiffnesses are $k_b = 6.50$ and $k_m = 13.8$ Mlbf/in, respectively.

- Determine the preload and service load stresses in the bolt. Compare these to the SAE minimum proof strength of the bolt.
- Specify the torque necessary to develop the preload, using Eq. (8-27).
- Specify the torque necessary to develop the preload, using Eq. (8-26) with $f = f_c = 0.15$.

Solution From Table 8-2, $A_t = 0.373$ in².
(a) The preload stress is

Answer

$$\sigma_i = \frac{F_i}{A_t} = \frac{25}{0.373} = 67.02 \text{ kpsi}$$

The stiffness constant is

$$C = \frac{k_b}{k_b + k_m} = \frac{6.5}{6.5 + 13.8} = 0.320$$

From Eq. (8–24), the stress under the service load is

Answer

$$\begin{aligned}\sigma_b &= \frac{F_b}{A_t} = \frac{CP + F_i}{A_t} = C \frac{P}{A_t} + \sigma_i \\ &= 0.320 \frac{6}{0.373} + 67.02 = 72.17 \text{ kpsi}\end{aligned}$$

From Table 8–9, the SAE minimum proof strength of the bolt is $S_p = 85$ kpsi. The preload and service load stresses are respectively 21 and 15 percent less than the proof strength.

(b) From Eq. (8–27), the torque necessary to achieve the preload is

Answer

$$T = K F_i d = 0.2(25)(10^3)(0.75) = 3750 \text{ lbf} \cdot \text{in}$$

(c) The minor diameter can be determined from the minor area in Table 8–2. Thus $d_r = \sqrt{4A_r/\pi} = \sqrt{4(0.351)/\pi} = 0.6685$ in. Thus, the mean diameter is $d_m = (0.75 + 0.6685)/2 = 0.7093$ in. The lead angle is

$$\lambda = \tan^{-1} \frac{l}{\pi d_m N} = \tan^{-1} \frac{1}{\pi d_m N} = \tan^{-1} \frac{1}{\pi(0.7093)(16)} = 1.6066^\circ$$

For $\alpha = 30^\circ$, Eq. (8–26) gives

$$\begin{aligned}T &= \left\{ \left[\frac{0.7093}{2(0.75)} \right] \left[\frac{\tan 1.6066^\circ + 0.15(\sec 30^\circ)}{1 - 0.15(\tan 1.6066^\circ)(\sec 30^\circ)} \right] + 0.625(0.15) \right\} 25(10^3)(0.75) \\ &= 3551 \text{ lbf} \cdot \text{in}\end{aligned}$$

which is 5.3 percent less than the value found in part (b).

8–9 Statically Loaded Tension Joint with Preload

Equations (8–24) and (8–25) represent the forces in a bolted joint with preload. The tensile stress in the bolt can be found as in Ex. 8–3 as

$$\sigma_b = \frac{CP}{A_t} + \frac{F_i}{A_t} \quad (a)$$

The limiting value of σ_b is the proof strength S_p . Thus, with the introduction of a load factor n , Eq. (a) becomes

$$\frac{CnP}{A_t} + \frac{F_i}{A_t} = S_p \quad (b)$$

or

$$n = \frac{S_p A_t - F_i}{CP} \quad (8-28)$$

Here we have called n a load factor rather than a factor of safety, though the two ideas are somewhat related. Any value of $n > 1$ in Eq. (8–28) ensures that the bolt stress is less than the proof strength.

Another means of ensuring a safe joint is to require that the external load be smaller than that needed to cause the joint to separate. If separation does occur, then

the entire external load will be imposed on the bolt. Let P_0 be the value of the external load that would cause joint separation. At separation, $F_m = 0$ in Eq. (8–25), and so

$$(1 - C)P_0 - F_i = 0 \quad (c)$$

Let the factor of safety against joint separation be

$$n_0 = \frac{P_0}{P} \quad (d)$$

Substituting $P_0 = n_0P$ in Eq. (c), we find

$$n_0 = \frac{F_i}{P(1 - C)} \quad (8-29)$$

as a load factor guarding against joint separation.

Figure 8–18 is the stress-strain diagram of a good-quality bolt material. Notice that there is no clearly defined yield point and that the diagram progresses smoothly up to fracture, which corresponds to the tensile strength. This means that no matter how much preload is given the bolt, it will retain its load-carrying capacity. This is what keeps the bolt tight and determines the joint strength. The pre-tension is the “muscle” of the joint, and its magnitude is determined by the bolt strength. If the full bolt strength is not used in developing the pre-tension, then money is wasted and the joint is weaker.

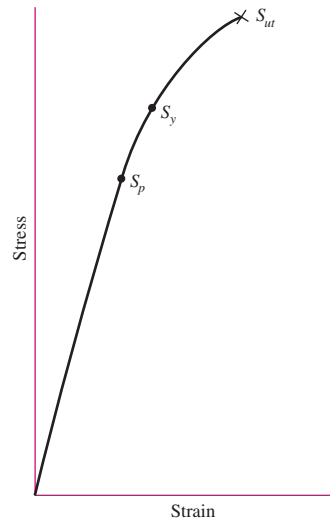
Good-quality bolts can be preloaded into the plastic range to develop more strength. Some of the bolt torque used in tightening produces torsion, which increases the principal tensile stress. However, this torsion is held only by the friction of the bolt head and nut; in time it relaxes and lowers the bolt tension slightly. Thus, as a rule, a bolt will either fracture during tightening, or not at all.

Above all, do not rely too much on wrench torque; it is not a good indicator of preload. Actual bolt elongation should be used whenever possible—especially with fatigue loading. In fact, if high reliability is a requirement of the design, then preload should always be determined by bolt elongation.

Russell, Burdsall & Ward Inc. (RB&W) recommendations for preload are 60 kpsi for SAE grade 5 bolts for nonpermanent connections, and that A325 bolts (equivalent to SAE grade 5) used in structural applications be tightened to proof load or beyond

Figure 8-18

Typical stress-strain diagram for bolt materials showing proof strength S_p , yield strength S_y , and ultimate tensile strength S_{ut} .



(85 kpsi up to a diameter of 1 in).⁷ Bowman⁸ recommends a preload of 75 percent of proof load, which is about the same as the RB&W recommendations for reused bolts. In view of these guidelines, it is recommended for both static and fatigue loading that the following be used for preload:

$$F_i = \begin{cases} 0.75F_p & \text{for nonpermanent connections, reused fasteners} \\ 0.90F_p & \text{for permanent connections} \end{cases} \quad (8-30)$$

where F_p is the proof load, obtained from the equation

$$F_p = A_t S_p \quad (8-31)$$

Here S_p is the proof strength obtained from Tables 8–9 to 8–11. For other materials, an approximate value is $S_p = 0.85S_y$. Be very careful not to use a soft material in a threaded fastener. For high-strength steel bolts used as structural steel connectors, if advanced tightening methods are used, tighten to yield.

You can see that the RB&W recommendations on preload are in line with what we have encountered in this chapter. The purposes of development were to give the reader the perspective to appreciate Eqs. (8–30) and a methodology with which to handle cases more specifically than the recommendations.

⁷Russell, Burdsall & Ward Inc., *Helpful Hints for Fastener Design and Application*, Mentor, Ohio, 1965, p. 42.

⁸Bowman Distribution–Barnes Group, *Fastener Facts*, Cleveland, 1985, p. 90.

EXAMPLE 8-4

Figure 8–19 is a cross section of a grade 25 cast-iron pressure vessel. A total of N bolts are to be used to resist a separating force of 36 kip.

(a) Determine k_b , k_m , and C .

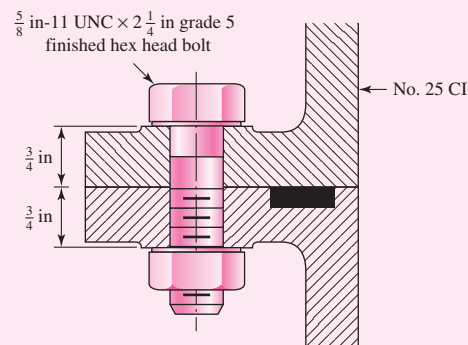
(b) Find the number of bolts required for a load factor of 2 where the bolts may be reused when the joint is taken apart.

Solution

(a) The grip is $l = 1.50$ in. From Table A–31, the nut thickness is $\frac{35}{64}$ in. Adding two threads beyond the nut of $\frac{2}{11}$ in gives a bolt length of

$$L = \frac{35}{64} + 1.50 + \frac{2}{11} = 2.229 \text{ in}$$

| Figure 8-19



From Table A–17 the next fraction size bolt is $L = 2\frac{1}{4}$ in. From Eq. (8–13), the thread length is $L_T = 2(0.625) + 0.25 = 1.50$ in. Thus the length of the unthreaded portion in the grip is $l_d = 2.25 - 1.50 = 0.75$ in. The threaded length in the grip is $l_t = l - l_d = 0.75$ in. From Table 8–2, $A_t = 0.226$ in². The major-diameter area is $A_d = \pi(0.625)^2/4 = 0.3068$ in². The bolt stiffness is then

Answer

$$k_b = \frac{A_d A_t E}{A_d l_t + A_t l_d} = \frac{0.3068(0.226)(30)}{0.3068(0.75) + 0.226(0.75)}$$

$$= 5.21 \text{ Mlbf/in}$$

From Table A–24, for no. 25 cast iron we will use $E = 14$ Mpsi. The stiffness of the members, from Eq. (8–22), is

Answer

$$k_m = \frac{0.5774\pi E d}{2 \ln \left(5 \frac{0.5774l + 0.5d}{0.5774l + 2.5d} \right)} = \frac{0.5774\pi(14)(0.625)}{2 \ln \left[5 \frac{0.5774(1.5) + 0.5(0.625)}{0.5774(1.5) + 2.5(0.625)} \right]}$$

$$= 8.95 \text{ Mlbf/in}$$

If you are using Eq. (8–23), from Table 8–8, $A = 0.77871$ and $B = 0.61616$, and

$$k_m = E d A \exp(Bd/l)$$

$$= 14(0.625)(0.77871) \exp[0.61616(0.625)/1.5]$$

$$= 8.81 \text{ Mlbf/in}$$

which is only 1.6 percent lower than the previous result.

From the first calculation for k_m , the stiffness constant C is

Answer

$$C = \frac{k_b}{k_b + k_m} = \frac{5.21}{5.21 + 8.95} = 0.368$$

(b) From Table 8–9, $S_p = 85$ kpsi. Then, using Eqs. (8–30) and (8–31), we find the recommended preload to be

$$F_i = 0.75 A_t S_p = 0.75(0.226)(85) = 14.4 \text{ kip}$$

For N bolts, Eq. (8–28) can be written

$$n = \frac{S_p A_t - F_i}{C(P/N)} \quad (1)$$

or

$$N = \frac{C n P}{S_p A_t - F_i} = \frac{0.368(2)(36)}{85(0.226) - 14.4} = 5.52$$

With six bolts, Eq. (1) gives

$$n = \frac{85(0.226) - 14.4}{0.368(36/6)} = 2.18$$

which is greater than the required value. Therefore we choose six bolts and use the recommended tightening preload.

8–10 Gasketed Joints

If a full gasket is present in the joint, the gasket pressure p is found by dividing the force in the member by the gasket area per bolt. Thus, for N bolts,

$$p = \frac{F_m}{A_g/N} \quad (a)$$

With a load factor n , Eq. (8–25) can be written as

$$F_m = (1 - C)nP - F_i \quad (b)$$

Substituting this into Eq. (a) gives the gasket pressure as

$$p = [F_i - nP(1 - C)] \frac{N}{A_g} \quad (8-32)$$

In full-gasketed joints uniformity of pressure on the gasket is important. To maintain adequate uniformity of pressure adjacent bolts should not be placed more than six nominal diameters apart on the bolt circle. To maintain wrench clearance, bolts should be placed at least three diameters apart. A rough rule for bolt spacing around a bolt circle is

$$3 \leq \frac{\pi D_b}{Nd} \leq 6 \quad (8-33)$$

where D_b is the diameter of the bolt circle and N is the number of bolts.

8–11 Fatigue Loading of Tension Joints

Tension-loaded bolted joints subjected to fatigue action can be analyzed directly by the methods of Chap. 6. Table 8–16 lists average fatigue stress-concentration factors for the fillet under the bolt head and also at the beginning of the threads on the bolt shank. These are already corrected for notch sensitivity and for surface finish. Designers should be aware that situations may arise in which it would be advisable to investigate these factors more closely, since they are only average values. In fact, Peterson⁹ observes that the distribution of typical bolt failures is about 15 percent under the head, 20 percent at the end of the thread, and 65 percent in the thread at the nut face.

Use of rolled threads is the predominant method of thread-forming in screw fasteners, where Table 8–16 applies. In thread-rolling, the amount of cold work and strain-strengthening is unknown to the designer; therefore, fully corrected (including K_f) axial endurance strength is reported in Table 8–17. For cut threads, the methods of Chap. 6 are useful. Anticipate that the endurance strengths will be considerably lower.

Most of the time, the type of fatigue loading encountered in the analysis of bolted joints is one in which the externally applied load fluctuates between zero and some

Table 8–16

Fatigue Stress-
Concentration Factors K_f
for Threaded Elements

SAE Grade	Metric Grade	Rolled Threads	Cut Threads	Fillet
0 to 2	3.6 to 5.8	2.2	2.8	2.1
4 to 8	6.6 to 10.9	3.0	3.8	2.3

⁹W. D. Pilkey, *Peterson's Stress Concentration Factors*, 2nd ed., John Wiley & Sons, New York, 1997, p. 387.

Table 8-17

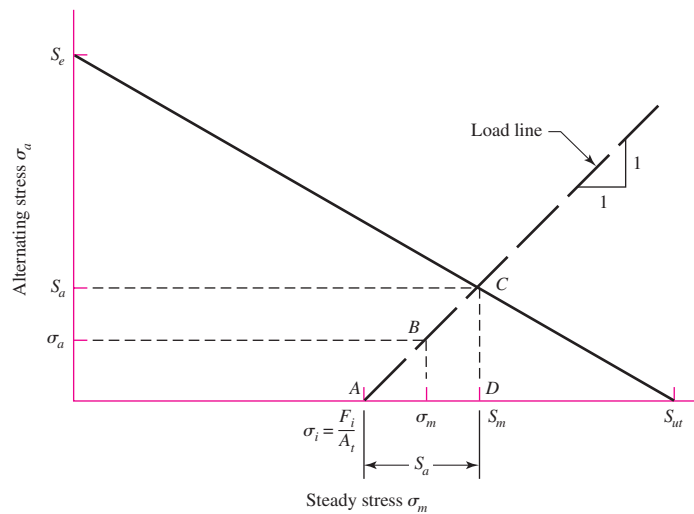
Fully Corrected
Endurance Strengths for
Bolts and Screws with
Rolled Threads*

Grade or Class	Size Range	Endurance Strength
SAE 5	$\frac{1}{4}$ –1 in	18.6 kpsi
	$1\frac{1}{8}$ – $1\frac{1}{2}$ in	16.3 kpsi
SAE 7	$\frac{1}{4}$ – $1\frac{1}{2}$ in	20.6 kpsi
SAE 8	$\frac{1}{4}$ – $1\frac{1}{2}$ in	23.2 kpsi
ISO 8.8	M16–M36	129 MPa
ISO 9.8	M1.6–M16	140 MPa
ISO 10.9	M5–M36	162 MPa
ISO 12.9	M1.6–M36	190 MPa

*Repeatedly-applied, axial loading, fully corrected.

Figure 8-20

Designer's fatigue diagram showing a Goodman failure line and how a load line is used to define failure and safety in preloaded bolted joints in fatigue. Point B represents nonfailure; point C, failure.



maximum force P . This would be the situation in a pressure cylinder, for example, where a pressure either exists or does not exist. For such cases, $F_{\max} = F_b$ and $F_{\min} = F_i$ and the alternating component of the force is $F_a = (F_{\max} - F_{\min})/2 = (F_b - F_i)/2$. Dividing this by A_t yields the alternating component of the bolt stress. Employing the notation from Sec. 8-7 with Eq. (8-24), we obtain

$$\sigma_a = \frac{F_b - F_i}{2A_t} = \frac{(CP + F_i) - F_i}{2A_t} = \frac{CP}{2A_t} \quad (8-34)$$

The mean stress is equal to the alternating component plus the minimum stress, $\sigma_i = F_i/A_t$, which results in

$$\sigma_m = \frac{CP}{2A_t} + \frac{F_i}{A_t} \quad (8-35)$$

On the designer's fatigue diagram, shown in Fig. 8-20, the load line is

$$\sigma_m = \sigma_a + \sigma_i \quad (8-36)$$

The next problem is to find the strength components S_a and S_m of the fatigue failure line. These depend on the failure criteria:

Goodman:

$$\frac{S_a}{S_e} + \frac{S_m}{S_{ut}} = 1 \quad (8-37)$$

Gerber:

$$\frac{S_a}{S_e} + \left(\frac{S_m}{S_{ut}}\right)^2 = 1 \quad (8-38)$$

ASME-elliptic:

$$\left(\frac{S_a}{S_e}\right)^2 + \left(\frac{S_m}{S_p}\right)^2 = 1 \quad (8-39)$$

For simultaneous solution between Eq. (8-36), as $S_m = S_a + \sigma_i$, and each of Eqs. (8-37) to (8-39) gives

Goodman:

$$S_a = \frac{S_e(S_{ut} - \sigma_i)}{S_{ut} + S_e} \quad (8-40)$$

$$S_m = S_a + \sigma_i \quad (8-41)$$

Gerber:

$$S_a = \frac{1}{2S_e} \left[S_{ut} \sqrt{S_{ut}^2 + 4S_e(S_e + \sigma_i)} - S_{ut}^2 - 2\sigma_i S_e \right] \quad (8-42)$$

$$S_m = S_a + \sigma_i$$

ASME-elliptic:

$$S_a = \frac{S_e}{S_p^2 + S_e^2} \left(S_p \sqrt{S_p^2 + S_e^2 - \sigma_i^2} - \sigma_i S_e \right) \quad (8-43)$$

$$S_m = S_a + \sigma_i$$

When using relations of this section, be sure to use K_f for both σ_a and σ_m . Otherwise, the slope of the load line will not remain 1 to 1.

Examination of Eqs. (8-37) to (8-43) shows parametric equations that relate the coordinates of interest to the form of the criteria. The factor of safety guarding against fatigue is given by

$$n_f = \frac{S_a}{\sigma_a} \quad (8-44)$$

Applying this to the Goodman criterion, for example, with Eqs. (8-34) and (8-40) and $\sigma_i = F_i/A_t$ gives

$$n_f = \frac{2S_e(S_{ut}A_t - F_i)}{CP(S_{ut} + S_e)} \quad (8-45)$$

when preload F_i is present. With no preload, $C = 1$, $F_i = 0$, and Eq. (8–45) becomes

$$n_{f0} = \frac{2S_e S_{ut} A_t}{P(S_{ut} + S_e)} \quad (8-46)$$

Preload is beneficial for resisting fatigue when n_f/n_{f0} is greater than unity. For Goodman, Eqs. (8–45) and (8–46) with $n_f/n_{f0} \geq 1$ puts an upper bound on the preload F_i of

$$F_i \leq (1 - C)S_{ut} A_t \quad (8-47)$$

If this cannot be achieved, and n_f is unsatisfactory, use the Gerber or ASME-elliptic criterion to obtain a less conservative assessment. If the design is still not satisfactory, additional bolts and/or a different size bolt may be called for. Bolts loosen, as they are friction devices, and cyclic loading and vibration as well as other effects allow the fasteners to lose tension with time. How does one fight loosening? Within strength limitations, the higher the preload the better. A rule of thumb is that preloads of 60 percent of proof load rarely loosen. If more is better, how much more? Well, not enough to create reused fasteners as a future threat. Alternatively, fastener-locking schemes can be employed.

After solving Eq. (8–44), you should also check the possibility of yielding, using the proof strength

$$n_p = \frac{S_p}{\sigma_m + \sigma_a} \quad (8-48)$$

EXAMPLE 8–5

Figure 8–21 shows a connection using cap screws. The joint is subjected to a fluctuating force whose maximum value is 5 kip per screw. The required data are: cap screw, 5/8 in-11 NC, SAE 5; hardened-steel washer, $t_w = \frac{1}{16}$ in thick; steel cover plate, $t_1 = \frac{5}{8}$ in, $E_s = 30$ Mpsi; and cast-iron base, $t_2 = \frac{5}{8}$ in, $E_{ci} = 16$ Mpsi.

- Find k_b , k_m , and C using the assumptions given in the caption of Fig. 8–21.
- Find all factors of safety and explain what they mean.

Solution

(a) For the symbols of Figs. 8–15 and 8–21, $h = t_1 + t_w = 0.6875$ in, $l = h + d/2 = 1$ in, and $D_2 = 1.5d = 0.9375$ in. The joint is composed of three frusta; the upper two frusta are steel and the lower one is cast iron.

For the upper frustum: $t = l/2 = 0.5$ in, $D = 0.9375$ in, and $E = 30$ Mpsi. Using these values in Eq. (8–20) gives $k_1 = 46.46$ Mlbf/in.

Figure 8–21

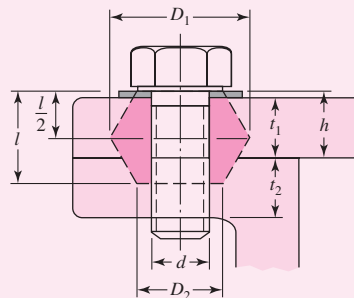
Pressure-cone frustum member model for a cap screw. For this model the significant sizes are

$$l = \begin{cases} h + t_2/2 & t_2 < d \\ h + d/2 & t_2 \geq d \end{cases}$$

$$D_1 = d_w + l \tan \alpha = 1.5d + 0.577l$$

$$D_2 = d_w = 1.5d$$

where l = effective grip. The solutions are for $\alpha = 30^\circ$ and $d_w = 1.5d$.



For the middle frustum: $t = h - l/2 = 0.1875$ in and $D = 0.9375 + 2(l - h) \tan 30^\circ = 1.298$ in. With these and $E_s = 30$ Mpsi, Eq. (8–20) gives $k_2 = 197.43$ Mlbf/in.

The lower frustum has $D = 0.9375$ in, $t = l - h = 0.3125$ in, and $E_{ci} = 16$ Mpsi. The same equation yields $k_3 = 32.39$ Mlbf/in.

Substituting these three stiffnesses into Eq. (8–18) gives $k_m = 17.40$ Mlbf/in. The cap screw is short and threaded all the way. Using $l = 1$ in for the grip and $A_t = 0.226$ in² from Table 8–2, we find the stiffness to be $k_b = A_t E / l = 6.78$ Mlbf/in. Thus the joint constant is

$$\text{Answer} \quad C = \frac{k_b}{k_b + k_m} = \frac{6.78}{6.78 + 17.40} = 0.280$$

(b) Equation (8–30) gives the preload as

$$F_i = 0.75F_p = 0.75A_t S_p = 0.75(0.226)(85) = 14.4 \text{ kip}$$

where from Table 8–9, $S_p = 85$ kpsi for an SAE grade 5 cap screw. Using Eq. (8–28), we obtain the load factor as

$$\text{Answer} \quad n = \frac{S_p A_t - F_i}{C P} = \frac{85(0.226) - 14.4}{0.280(5)} = 3.44$$

This factor prevents the bolt stress from becoming equal to the proof strength.

Next, using Eq. (8–29), we have

$$\text{Answer} \quad n_0 = \frac{F_i}{P(1 - C)} = \frac{14.4}{5(1 - 0.280)} = 4.00$$

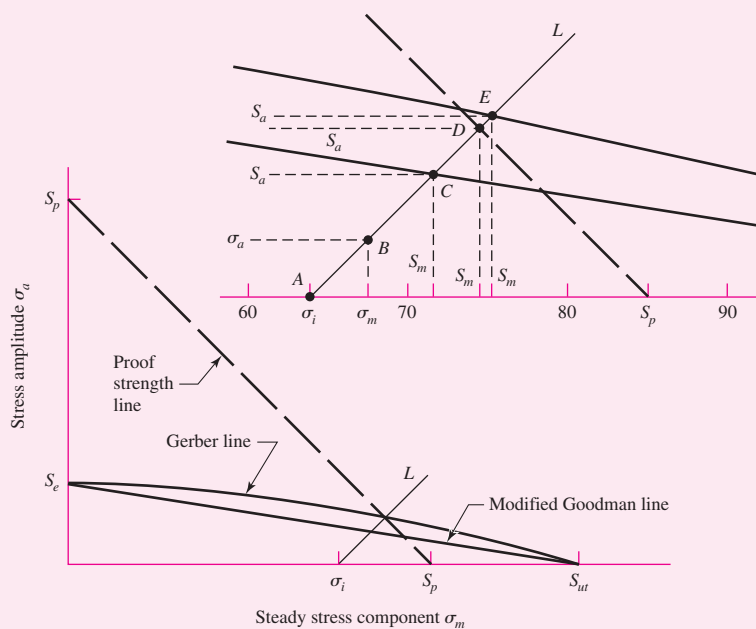
If the force P gets too large, the joint will separate and the bolt will take the entire load. This factor guards against that event.

For the remaining factors, refer to Fig. 8–22. This diagram contains the modified Goodman line, the Gerber line, the proof-strength line, and the load line. The intersection

Figure 8–22

Designer's fatigue diagram for preloaded bolts, drawn to scale, showing the modified Goodman line, the Gerber line, and the larger proof-strength line, with an exploded view of the area of interest.

The strengths used are $S_p = 85$ kpsi, $S_e = 18.6$ kpsi, and $S_{ut} = 120$ kpsi. The coordinates are A, $\sigma_i = 63.72$ kpsi; B, $\sigma_a = 3.10$ kpsi, $\sigma_m = 66.82$ kpsi; C, $S_a = 7.55$ kpsi, $S_m = 71.29$ kpsi; D, $S_a = 10.64$ kpsi, $S_m = 74.36$ kpsi; E, $S_a = 11.32$ kpsi, $S_m = 75.04$ kpsi.



of the load line L with the respective failure lines at points C , D , and E defines a set of strengths S_a and S_m at each intersection. Point B represents the stress state σ_a , σ_m . Point A is the preload stress σ_i . Therefore the load line begins at A and makes an angle having a unit slope. This angle is 45° only when both stress axes have the same scale.

The factors of safety are found by dividing the distances AC , AD , and AE by the distance AB . Note that this is the same as dividing S_a for each theory by σ_a .

The quantities shown in the caption of Fig. 8–22 are obtained as follows:

Point A

$$\sigma_i = \frac{F_i}{A_t} = \frac{14.4}{0.226} = 63.72 \text{ kpsi}$$

Point B

$$\sigma_a = \frac{CP}{2A_t} = \frac{0.280(5)}{2(0.226)} = 3.10 \text{ kpsi}$$

$$\sigma_m = \sigma_a + \sigma_i = 3.10 + 63.72 = 66.82 \text{ kpsi}$$

Point C

This is the modified Goodman criteria. From Table 8–17, we find $S_e = 18.6$ kpsi. Then, using Eq. (8–40), we get

$$S_a = \frac{S_e(S_{ut} - \sigma_i)}{S_{ut} + S_e} = \frac{18.6(120 - 63.72)}{120 + 18.6} = 7.55 \text{ kpsi}$$

The factor of safety is found to be

Answer

$$n_f = \frac{S_a}{\sigma_a} = \frac{7.55}{3.10} = 2.44$$

Point D

This is on the proof-strength line where

$$S_m + S_a = S_p \quad (1)$$

In addition, the horizontal projection of the load line AD is

$$S_m = \sigma_i + S_a \quad (2)$$

Solving Eqs. (1) and (2) simultaneously results in

$$S_a = \frac{S_p - \sigma_i}{2} = \frac{85 - 63.72}{2} = 10.64 \text{ kpsi}$$

The factor of safety resulting from this is

Answer

$$n_p = \frac{S_a}{\sigma_a} = \frac{10.64}{3.10} = 3.43$$

which, of course, is identical to the result previously obtained by using Eq. (8–28).

A similar analysis of a fatigue diagram could have been done using yield strength instead of proof strength. Though the two strengths are somewhat related, proof strength is a much better and more positive indicator of a fully loaded bolt than is the yield strength. It is also worth remembering that proof-strength values are specified in design codes; yield strengths are not.

We found $n_f = 2.44$ on the basis of fatigue and the modified Goodman line, and $n_p = 3.43$ on the basis of proof strength. Thus the danger of failure is by fatigue, not by overproof loading. These two factors should always be compared to determine where the greatest danger lies.

Point E

For the Gerber criterion, from Eq. (8–42),

$$\begin{aligned} S_a &= \frac{1}{2S_e} \left[S_{ut} \sqrt{S_{ut}^2 + 4S_e(S_e + \sigma_i)} - S_{ut}^2 - 2\sigma_i S_e \right] \\ &= \frac{1}{2(18.6)} \left[120 \sqrt{120^2 + 4(18.6)(18.6 + 63.72)} - 120^2 - 2(63.72)(18.6) \right] \\ &= 11.33 \text{ kpsi} \end{aligned}$$

Thus for the Gerber criterion the safety factor is

$$\text{Answer} \quad n_f = \frac{S_a}{\sigma_a} = \frac{11.33}{3.10} = 3.65$$

which is greater than $n_p = 3.43$ and contradicts the conclusion earlier that the danger of failure is fatigue. Figure 8–22 clearly shows the conflict where point *D* lies between points *C* and *E*. Again, the conservative nature of the Goodman criterion explains the discrepancy and the designer must form his or her own conclusion.

8–12 Bolted and Riveted Joints Loaded in Shear¹⁰

Riveted and bolted joints loaded in shear are treated exactly alike in design and analysis.

Figure 8–23*a* shows a riveted connection loaded in shear. Let us now study the various means by which this connection might fail.

Figure 8–23*b* shows a failure by bending of the rivet or of the riveted members. The bending moment is approximately $M = Ft/2$, where F is the shearing force and t is the grip of the rivet, that is, the total thickness of the connected parts. The bending stress in the members or in the rivet is, neglecting stress concentration,

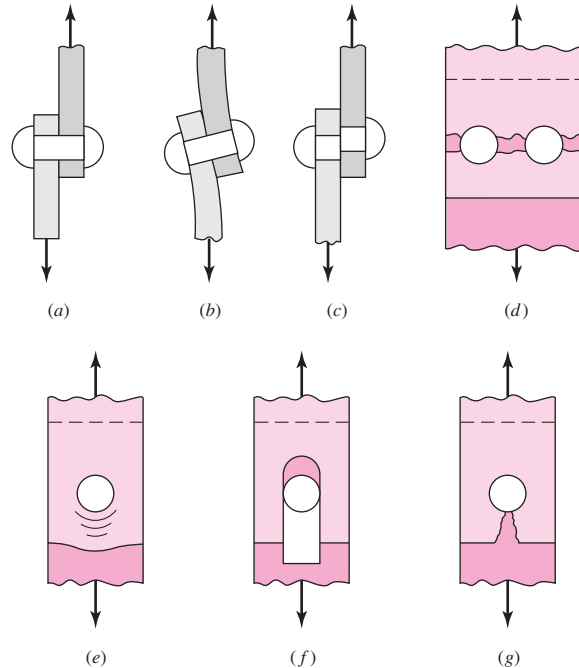
$$\sigma = \frac{M}{I/c} \quad (8-49)$$

where I/c is the section modulus for the weakest member or for the rivet or rivets, depending upon which stress is to be found. The calculation of the bending stress in

¹⁰The design of bolted and riveted connections for boilers, bridges, buildings, and other structures in which danger to human life is involved is strictly governed by various construction codes. When designing these structures, the engineer should refer to the *American Institute of Steel Construction Handbook*, the American Railway Engineering Association specifications, or the Boiler Construction Code of the American Society of Mechanical Engineers.

Figure 8–23

Modes of failure in shear loading of a bolted or riveted connection: (a) shear loading; (b) bending of rivet; (c) shear of rivet; (d) tensile failure of members; (e) bearing of rivet on members or bearing of members on rivet; (f) shear tear-out; (g) tensile tear-out.



this manner is an assumption, because we do not know exactly how the load is distributed to the rivet or the relative deformations of the rivet and the members. Although this equation can be used to determine the bending stress, it is seldom used in design; instead its effect is compensated for by an increase in the factor of safety.

In Fig. 8–23c failure of the rivet by pure shear is shown; the stress in the rivet is

$$\tau = \frac{F}{A} \quad (8-50)$$

where A is the cross-sectional area of all the rivets in the group. It may be noted that it is standard practice in structural design to use the nominal diameter of the rivet rather than the diameter of the hole, even though a hot-driven rivet expands and nearly fills up the hole.

Rupture of one of the connected members or plates by pure tension is illustrated in Fig. 8–23d. The tensile stress is

$$\sigma = \frac{F}{A} \quad (8-51)$$

where A is the net area of the plate, that is, the area reduced by an amount equal to the area of all the rivet holes. For brittle materials and static loads and for either ductile or brittle materials loaded in fatigue, the stress-concentration effects must be included. It is true that the use of a bolt with an initial preload and, sometimes, a rivet will place the area around the hole in compression and thus tend to nullify the effects of stress concentration, but unless definite steps are taken to ensure that the preload does not relax, it is on the conservative side to design as if the full stress-concentration effect were present. The stress-concentration effects are not considered in structural design, because the loads are static and the materials ductile.

In calculating the area for Eq. (8–51), the designer should, of course, use the combination of rivet or bolt holes that gives the smallest area.

Figure 8–23*e* illustrates a failure by crushing of the rivet or plate. Calculation of this stress, which is usually called a *bearing stress*, is complicated by the distribution of the load on the cylindrical surface of the rivet. The exact values of the forces acting upon the rivet are unknown, and so it is customary to assume that the components of these forces are uniformly distributed over the projected contact area of the rivet. This gives for the stress

$$\sigma = \frac{F}{A} \quad (8-52)$$

where the projected area for a single rivet is $A = td$. Here, t is the thickness of the thinnest plate and d is the rivet or bolt diameter.

Edge shearing, or tearing, of the margin is shown in Fig. 8–23*f* and *g*, respectively. In structural practice this failure is avoided by spacing the rivets at least $1\frac{1}{2}$ diameters away from the edge. Bolted connections usually are spaced an even greater distance than this for satisfactory appearance, and hence this type of failure may usually be neglected.

In a rivet joint, the rivets all share the load in shear, bearing in the rivet, bearing in the member, and shear in the rivet. Other failures are participated in by only some of the joint. In a bolted joint, shear is taken by clamping friction, and bearing does not exist. When bolt preload is lost, one bolt begins to carry the shear and bearing until yielding slowly brings other fasteners in to share the shear and bearing. Finally, all participate, and this is the basis of most bolted-joint analysis if loss of bolt preload is complete. The usual analysis involves

- Bearing in the bolt (all bolts participate)
- Bearing in members (all holes participate)
- Shear of bolt (all bolts participate eventually)
- Distinguishing between thread and shank shear
- Edge shearing and tearing of member (edge bolts participate)
- Tensile yielding of member across bolt holes
- Checking member capacity

EXAMPLE 8–6

Two 1- by 4-in 1018 cold-rolled steel bars are butt-spliced with two $\frac{1}{2}$ - by 4-in 1018 cold-rolled splice plates using four $\frac{3}{4}$ -in-16 UNF grade 5 bolts as depicted in Fig. 8–24. For a design factor of $n_d = 1.5$ estimate the static load F that can be carried if the bolts lose preload.

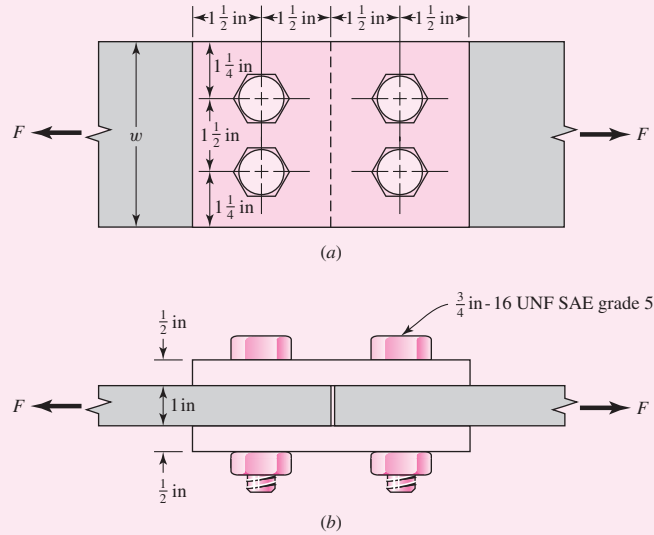
Solution

From Table A–20, minimum strengths of $S_y = 54$ kpsi and $S_{ut} = 64$ kpsi are found for the members, and from Table 8–9 minimum strengths of $S_p = 85$ kpsi and $S_{ut} = 120$ kpsi for the bolts are found.

$F/2$ is transmitted by each of the splice plates, but since the areas of the splice plates are half those of the center bars, the stresses associated with the plates are the same. So for stresses associated with the plates, the force and areas used will be those of the center plates.

438 Mechanical Engineering Design

Figure 8-24



Bearing in bolts, all bolts loaded:

$$\sigma = \frac{F}{2td} = \frac{S_p}{n_d}$$

$$F = \frac{2tdS_p}{n_d} = \frac{2(1)\left(\frac{3}{4}\right)85}{1.5} = 85 \text{ kip}$$

Bearing in members, all bolts active:

$$\sigma = \frac{F}{2td} = \frac{(S_y)_{\text{mem}}}{n_d}$$

$$F = \frac{2td(S_y)_{\text{mem}}}{n_d} = \frac{2(1)\left(\frac{3}{4}\right)54}{1.5} = 54 \text{ kip}$$

Shear of bolt, all bolts active: If the bolt threads do not extend into the shear planes for four shanks:

$$\tau = \frac{F}{4\pi d^2/4} = 0.577 \frac{S_p}{n_d}$$

$$F = 0.577\pi d^2 \frac{S_p}{n_d} = 0.577\pi(0.75)^2 \frac{85}{1.5} = 57.8 \text{ kip}$$

If the bolt threads extend into a shear plane:

$$\tau = \frac{F}{4A_r} = 0.577 \frac{S_p}{n_d}$$

$$F = \frac{0.577(4)A_r S_p}{n_d} = \frac{0.577(4)0.351(85)}{1.5} = 45.9 \text{ kip}$$

Edge shearing of member at two margin bolts: From Fig. 8–25,

$$\tau = \frac{F}{4at} = \frac{0.577(S_y)_{\text{mem}}}{n_d}$$

$$F = \frac{4at0.577(S_y)_{\text{mem}}}{n_d} = \frac{4(1.125)(1)0.577(54)}{1.5} = 93.5 \text{ kip}$$

Tensile yielding of members across bolt holes:

$$\sigma = \frac{F}{[4 - 2(\frac{3}{4})]t} = \frac{(S_y)_{\text{mem}}}{n_d}$$

$$F = \frac{[4 - 2(\frac{3}{4})]t(S_y)_{\text{mem}}}{n_d} = \frac{[4 - 2(\frac{3}{4})](1)54}{1.5} = 90 \text{ kip}$$

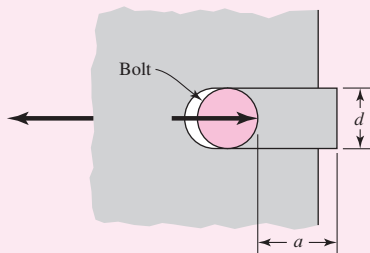
Member yield:

$$F = \frac{wt(S_y)_{\text{mem}}}{n_d} = \frac{4(1)54}{1.5} = 144 \text{ kip}$$

On the basis of bolt shear, the limiting value of the force is 45.9 kip, assuming the threads extend into a shear plane. However, it would be poor design to allow the threads to extend into a shear plane. So, assuming a *good* design based on bolt shear, the limiting value of the force is 57.8 kip. For the members, the bearing stress limits the load to 54 kip.

Figure 8–25

Edge shearing of member.



Shear Joints with Eccentric Loading

Integral to the analysis of a shear joint is locating the center of relative motion between the two members. In Fig. 8–26 let A_1 to A_5 be the respective cross-sectional areas of a group of five pins, or hot-driven rivets, or tight-fitting shoulder bolts. Under this assumption the rotational pivot point lies at the centroid of the cross-sectional area pattern of the pins, rivets, or bolts. Using statics, we learn that the centroid G is located by the coordinates \bar{x} and \bar{y} , where x_i and y_i are the distances to the i th area center:

$$\bar{x} = \frac{A_1x_1 + A_2x_2 + A_3x_3 + A_4x_4 + A_5x_5}{A_1 + A_2 + A_3 + A_4 + A_5} = \frac{\sum_1^n A_i x_i}{\sum_1^n A_i}$$

$$\bar{y} = \frac{A_1y_1 + A_2y_2 + A_3y_3 + A_4y_4 + A_5y_5}{A_1 + A_2 + A_3 + A_4 + A_5} = \frac{\sum_1^n A_i y_i}{\sum_1^n A_i}$$
(8–53)

Figure 8–26

Centroid of pins, rivets, or bolts.

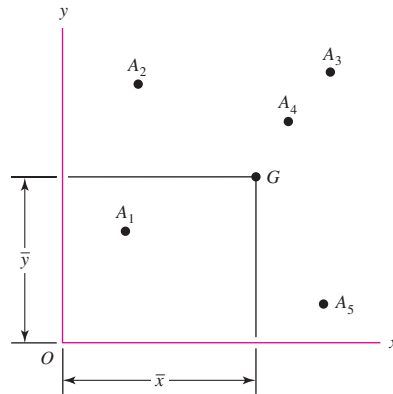
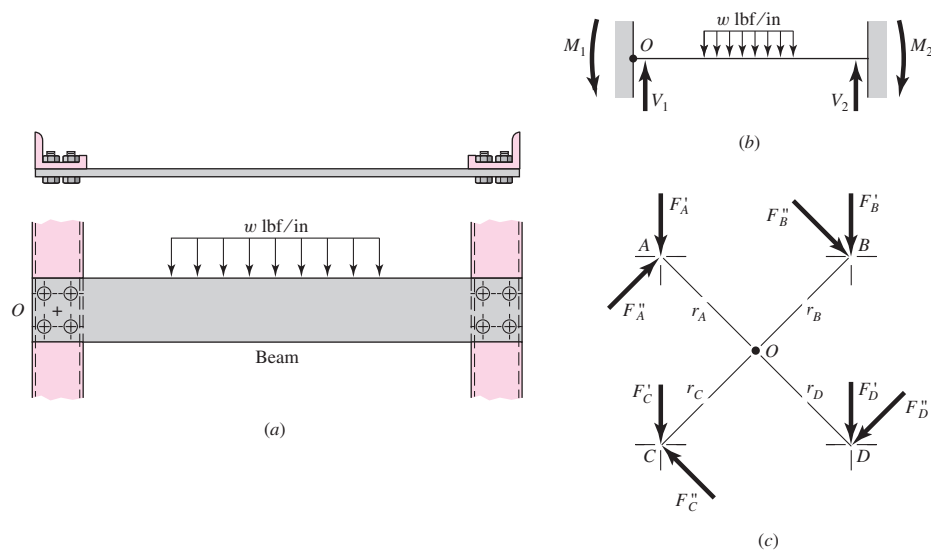


Figure 8–27

(a) Beam bolted at both ends with distributed load; (b) free-body diagram of beam; (c) enlarged view of bolt group centered at O showing primary and secondary resultant shear forces.



In many instances the centroid can be located by symmetry.

An example of eccentric loading of fasteners is shown in Fig. 8–27. This is a portion of a machine frame containing a beam subjected to the action of a bending load. In this case, the beam is fastened to vertical members at the ends with specially prepared load-sharing bolts. You will recognize the schematic representation in Fig. 8–27b as a statically indeterminate beam with both ends fixed and with moment and shear reactions at each end.

For convenience, the centers of the bolts at the left end of the beam are drawn to a larger scale in Fig. 8–27c. Point O represents the centroid of the group, and it is assumed in this example that all the bolts are of the same diameter. Note that the forces shown in Fig. 8–27c are the *resultant* forces acting on the pins with a net force and moment equal and opposite to the *reaction* loads V_1 and M_1 acting at O . The total load taken by each bolt will be calculated in three steps. In the first step the shear V_1 is divided equally among the bolts so that each bolt takes $F' = V_1/n$, where n refers to the number of bolts in the group and the force F' is called the *direct load*, or *primary shear*.

It is noted that an equal distribution of the direct load to the bolts assumes an absolutely rigid member. The arrangement of the bolts or the shape and size of the

members sometimes justifies the use of another assumption as to the division of the load. The direct loads F' are shown as vectors on the loading diagram (Fig. 8–27c).

The *moment load*, or *secondary shear*, is the additional load on each bolt due to the moment M_1 . If r_A , r_B , r_C , etc., are the radial distances from the centroid to the center of each bolt, the moment and moment loads are related as follows:

$$M_1 = F''_A r_A + F''_B r_B + F''_C r_C + \dots \quad (a)$$

where the F'' are the moment loads. The force taken by each bolt depends upon its radial distance from the centroid; that is, the bolt farthest from the centroid takes the greatest load, while the nearest bolt takes the smallest. We can therefore write

$$\frac{F''_A}{r_A} = \frac{F''_B}{r_B} = \frac{F''_C}{r_C} \quad (b)$$

where again, the diameters of the bolts are assumed equal. If not, then one replaces F'' in Eq. (b) with the shear stresses $\tau'' = 4F''/\pi d^2$ for each bolt. Solving Eqs. (a) and (b) simultaneously, we obtain

$$F''_n = \frac{M_1 r_n}{r_A^2 + r_B^2 + r_C^2 + \dots} \quad (8-54)$$

where the subscript n refers to the particular bolt whose load is to be found. These moment loads are also shown as vectors on the loading diagram.

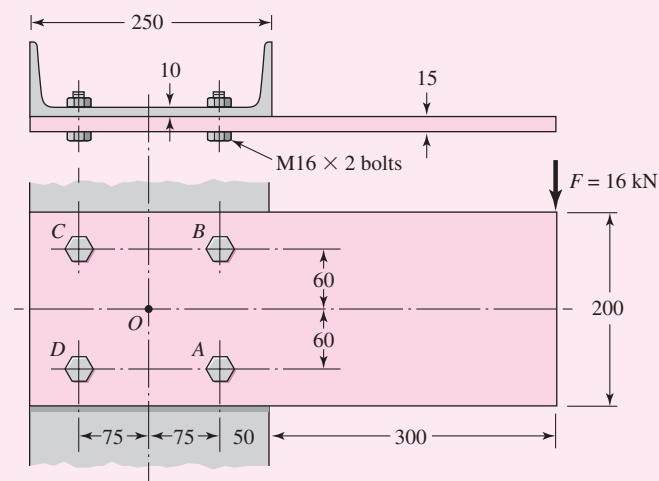
In the third step the direct and moment loads are added vectorially to obtain the resultant load on each bolt. Since all the bolts or rivets are usually the same size, only that bolt having the maximum load need be considered. When the maximum load is found, the strength may be determined by using the various methods already described.

EXAMPLE 8-7

Shown in Fig. 8–28 is a 15- by 200-mm rectangular steel bar cantilevered to a 250-mm steel channel using four tightly fitted bolts located at A, B, C, and D.

Figure 8-28

Dimensions in millimeters.



For a $F = 16$ kN load find

- (a) The resultant load on each bolt
- (b) The maximum shear stress in each bolt
- (c) The maximum bearing stress
- (d) The critical bending stress in the bar

Solution

(a) Point O , the centroid of the bolt group in Fig. 8–28, is found by symmetry. If a free-body diagram of the beam were constructed, the shear reaction V would pass through O and the moment reactions M would be about O . These reactions are

$$V = 16 \text{ kN} \quad M = 16(425) = 6800 \text{ N} \cdot \text{m}$$

In Fig. 8–29, the bolt group has been drawn to a larger scale and the reactions are shown. The distance from the centroid to the center of each bolt is

$$r = \sqrt{(60)^2 + (75)^2} = 96.0 \text{ mm}$$

The primary shear load per bolt is

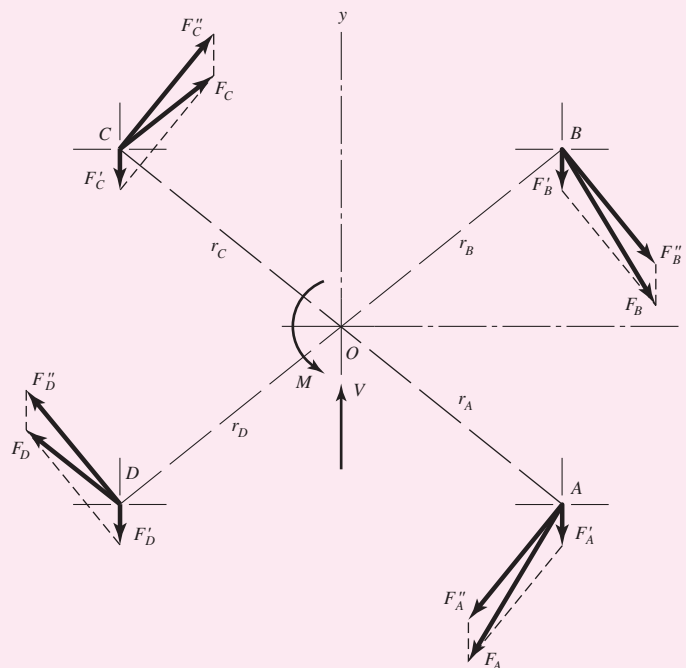
$$F' = \frac{V}{n} = \frac{16}{4} = 4 \text{ kN}$$

Since the secondary shear forces are equal, Eq. (8–54) becomes

$$F'' = \frac{Mr}{4r^2} = \frac{M}{4r} = \frac{6800}{4(96.0)} = 17.7 \text{ kN}$$

The primary and secondary shear forces are plotted to scale in Fig. 8–29 and the resultants obtained by using the parallelogram rule. The magnitudes are found by measurement

Figure 8–29



(or analysis) to be

$$\text{Answer} \quad F_A = F_B = 21.0 \text{ kN}$$

$$\text{Answer} \quad F_C = F_D = 14.8 \text{ kN}$$

(b) Bolts A and B are critical because they carry the largest shear load. Does this shear act on the threaded portion of the bolt, or on the unthreaded portion? The bolt length will be 25 mm plus the height of the nut plus about 2 mm for a washer. Table A–31 gives the nut height as 14.8 mm. Including two threads beyond the nut, this adds up to a length of 43.8 mm, and so a bolt 46 mm long will be needed. From Eq. (8–14) we compute the thread length as $L_T = 38$ mm. Thus the unthreaded portion of the bolt is $46 - 38 = 8$ mm long. This is less than the 15 mm for the plate in Fig. 8–28, and so the bolt will tend to shear across its minor diameter. Therefore the shear-stress area is $A_s = 144 \text{ mm}^2$, and so the shear stress is

$$\text{Answer} \quad \tau = \frac{F}{A_s} = \frac{21.0(10)^3}{144} = 146 \text{ MPa}$$

(c) The channel is thinner than the bar, and so the largest bearing stress is due to the pressing of the bolt against the channel web. The bearing area is $A_b = td = 10(16) = 160 \text{ mm}^2$. Thus the bearing stress is

$$\text{Answer} \quad \sigma = \frac{F}{A_b} = \frac{21.0(10)^3}{160} = 131 \text{ MPa}$$

(d) The critical bending stress in the bar is assumed to occur in a section parallel to the y axis and through bolts A and B . At this section the bending moment is

$$M = 16(300 + 50) = 5600 \text{ N} \cdot \text{m}$$

The second moment of area through this section is obtained by the use of the transfer formula, as follows:

$$\begin{aligned} I &= I_{\text{bar}} - 2(I_{\text{holes}} + \bar{d}^2 A) \\ &= \frac{15(200)^3}{12} - 2 \left[\frac{15(16)^3}{12} + (60)^2(15)(16) \right] = 8.26(10)^6 \text{ mm}^4 \end{aligned}$$

Then

$$\text{Answer} \quad \sigma = \frac{Mc}{I} = \frac{5600(100)}{8.26(10)^6} (10)^3 = 67.8 \text{ MPa}$$

PROBLEMS

8-1

A power screw is 25 mm in diameter and has a thread pitch of 5 mm.

- Find the thread depth, the thread width, the mean and root diameters, and the lead, provided square threads are used.
- Repeat part (a) for Acme threads.

- 8-2** Using the information in the footnote of Table 8-1, show that the tensile-stress area is

$$A_t = \frac{\pi}{4}(d - 0.938194p)^2$$

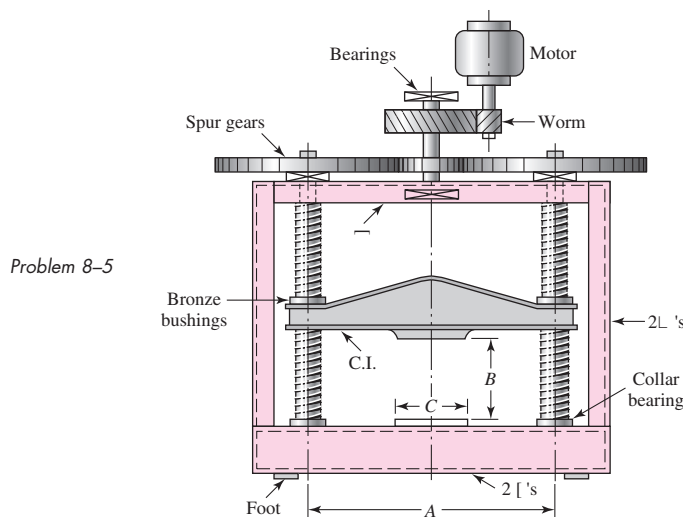
- 8-3** Show that for zero collar friction the efficiency of a square-thread screw is given by the equation

$$e = \tan \lambda \frac{1 - f \tan \lambda}{\tan \lambda + f}$$

Plot a curve of the efficiency for lead angles up to 45° . Use $f = 0.08$.

- 8-4** A single-threaded 25-mm power screw is 25 mm in diameter with a pitch of 5 mm. A vertical load on the screw reaches a maximum of 6 kN. The coefficients of friction are 0.05 for the collar and 0.08 for the threads. The frictional diameter of the collar is 40 mm. Find the overall efficiency and the torque to “raise” and “lower” the load.

- 8-5** The machine shown in the figure can be used for a tension test but not for a compression test. Why? Can both screws have the same hand?



- 8-6** The press shown for Prob. 8-5 has a rated load of 5000 lbf. The twin screws have Acme threads, a diameter of 3 in, and a pitch of $\frac{1}{2}$ in. Coefficients of friction are 0.05 for the threads and 0.06 for the collar bearings. Collar diameters are 5 in. The gears have an efficiency of 95 percent and a speed ratio of 75:1. A slip clutch, on the motor shaft, prevents overloading. The full-load motor speed is 1720 rev/min.

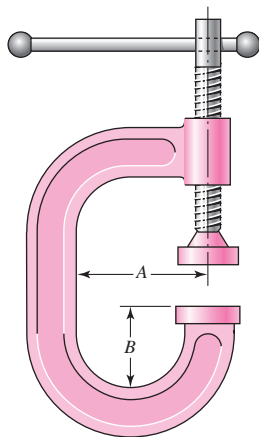
- (a) When the motor is turned on, how fast will the press head move?
(b) What should be the horsepower rating of the motor?

- 8-7** A screw clamp similar to the one shown in the figure has a handle with diameter $\frac{3}{16}$ in made of cold-drawn AISI 1006 steel. The overall length is 3 in. The screw is $\frac{7}{16}$ in-14 UNC and is $5\frac{3}{4}$ in long, overall. Distance A is 2 in. The clamp will accommodate parts up to $4\frac{3}{16}$ in high.

- (a) What screw torque will cause the handle to bend permanently?
(b) What clamping force will the answer to part (a) cause if the collar friction is neglected and if the thread friction is 0.075?

- (c) What clamping force will cause the screw to buckle?
(d) Are there any other stresses or possible failures to be checked?

Problem 8–7

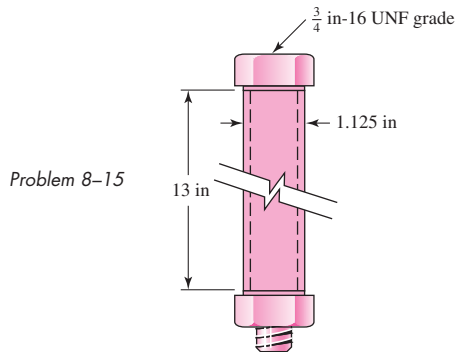


- 8–8** The C clamp shown in the figure for Prob. 8–7 uses a $\frac{5}{8}$ -in-6 Acme thread. The frictional coefficients are 0.15 for the threads and for the collar. The collar, which in this case is the anvil striker's swivel joint, has a friction diameter of $\frac{7}{16}$ in. Calculations are to be based on a maximum force of 6 lbf applied to the handle at a radius of $2\frac{3}{4}$ in from the screw centerline. Find the clamping force.
- 8–9** Find the power required to drive a 40-mm power screw having double square threads with a pitch of 6 mm. The nut is to move at a velocity of 48 mm/s and move a load of $F = 10$ kN. The frictional coefficients are 0.10 for the threads and 0.15 for the collar. The frictional diameter of the collar is 60 mm.
- 8–10** A single square-thread power screw has an input power of 3 kW at a speed of 1 rev/s. The screw has a diameter of 36 mm and a pitch of 6 mm. The frictional coefficients are 0.14 for the threads and 0.09 for the collar, with a collar friction radius of 45 mm. Find the axial resisting load F and the combined efficiency of the screw and collar.
- 8–11** A bolted joint is to have a grip consisting of two $\frac{1}{2}$ -in steel plates and one wide $\frac{1}{2}$ -in American Standard plain washer to fit under the head of the $\frac{1}{2}$ -in-13 \times 1.75 in UNC hex-head bolt.
- What is the length of the thread L_T for this diameter inch-series bolt?
 - What is the length of the grip l ?
 - What is the height H of the nut?
 - Is the bolt long enough? If not, round to the next larger preferred length (Table A–17).
 - What is the length of the shank and threaded portions of the bolt within the grip? These lengths are needed in order to estimate the bolt spring rate k_b .
- 8–12** A bolted joint is to have a grip consisting of two 14-mm steel plates and one 14R metric plain washer to fit under the head of the M14 \times 2 hex-head bolt, 50 mm long.
- What is the length of the thread L_T for this diameter metric coarse-pitch series bolt?
 - What is the length of the grip l ?
 - What is the height H of the nut?
 - Is the bolt long enough? If not, round to the next larger preferred length (Table A–17).
 - What is the length of the shank and the threaded portions of the bolt within the grip? These lengths are needed in order to estimate bolt spring rate k_b .

- 8-13** A blanking disk 0.875 in thick is to be fastened to a spool whose flange is 1 in thick, using eight $\frac{1}{2}$ -in-13 \times 1.75 in hex-head cap screws.
- What is the length of threads L_T for this cap screw?
 - What is the effective length of the grip l' ?
 - Is the length of this cap screw sufficient? If not, round up.
 - Find the shank length l_d and the useful thread length l_t within the grip. These lengths are needed for the estimate of the fastener spring rate k_b .

- 8-14** A blanking disk is 20 mm thick and is to be fastened to a spool whose flange is 25 mm thick, using eight M12 \times 40 hex-head metric cap screws.
- What is the length of the threads L_T for this fastener?
 - What is the effective grip length l' ?
 - Is the length of this fastener sufficient? If not, round to the next preferred length.
 - Find the shank length l_d and the useful threaded length in the grip l_t . These lengths are needed in order to estimate the fastener spring rate k_b .

- 8-15** A $\frac{3}{4}$ -in-16 UNF series SAE grade 5 bolt has a $\frac{3}{4}$ -in ID tube 13 in long, clamped between washer faces of bolt and nut by turning the nut snug and adding one-third of a turn. The tube OD is the washer-face diameter $d_w = 1.5d = 1.5(0.75) = 1.125$ in = OD.



- What is the spring rate of the bolt and the tube, if the tube is made of steel? What is the joint constant C ?
 - When the one-third turn-of-nut is applied, what is the initial tension F_i in the bolt?
 - What is the bolt tension at opening if additional tension is applied to the bolt external to the joint?
- 8-16** From your experience with Prob. 8-15, generalize your solution to develop a turn-of-nut equation

$$N_t = \frac{\theta}{360^\circ} = \left(\frac{k_b + k_m}{k_b k_m} \right) F_i N$$

where N_t = turn of the nut from snug tight

θ = turn of the nut in degrees

N = number of thread/in ($1/p$ where p is pitch)

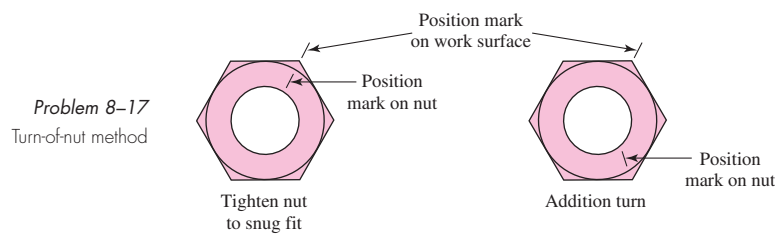
F_i = initial preload

k_b, k_m = spring rates of the bolt and members, respectively

Use this equation to find the relation between torque-wrench setting T and turn-of-nut N_t . (“Snug tight” means the joint has been tightened to perhaps half the intended preload to flatten asperities on the washer faces and the members. Then the nut is loosened and retightened

finger tight, and the nut is rotated the number of degrees indicated by the equation. Properly done, the result is competitive with torque wrenching.)

- 8-17** RB&W¹¹ recommends turn-of-nut from snug fit to preload as follows: 1/3 turn for bolt grips of 1–4 diameters, 1/2 turn for bolt grips 4–8 diameters, and 2/3 turn for grips of 8–12 diameters. These recommendations are for structural steel fabrication (permanent joints), producing preloads of 100 percent of proof strength and beyond. Machinery fabricators with fatigue loadings and possible joint disassembly have much smaller turns-of-nut. The RB&W recommendation enters the nonlinear plastic deformation zone.

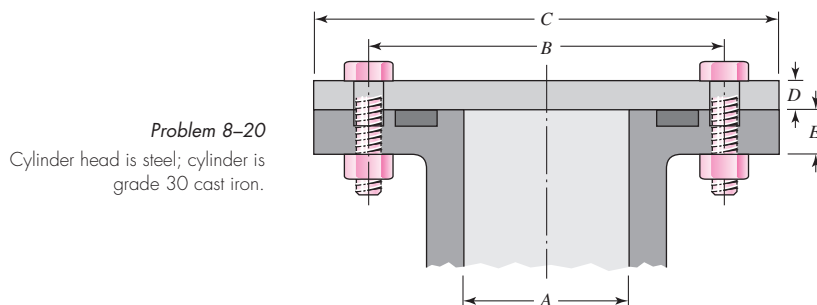


- (a) For Ex. 8-4, use Eq. (8-27) with $K = 0.2$ to estimate the torque necessary to establish the desired preload. Then, using the results from Prob. 8-16, determine the turn of the nut in degrees. How does this compare with the RB&W recommendations?
- (b) Repeat part (a) for Ex. 8-5.

- 8-18** Take Eq. (8-22) and express $k_m/(Ed)$ as a function of l/d , then compare with Eq. (8-23) for $d/l = 0.5$.

- 8-19** A joint has the same geometry as Ex. 8-4, but the lower member is steel. Use Eq. (8-23) to find the spring rate of the members in the grip. *Hint:* Equation (8-23) applies to the stiffness of two sections of a joint of one material. If each section has the same thickness, then what is the stiffness of one of the sections?

- 8-20** The figure illustrates the connection of a cylinder head to a pressure vessel using 10 bolts and a confined-gasket seal. The effective sealing diameter is 150 mm. Other dimensions are: $A = 100$, $B = 200$, $C = 300$, $D = 20$, and $E = 20$, all in millimeters. The cylinder is used to store gas at a static pressure of 6 MPa. ISO class 8.8 bolts with a diameter of 12 mm have been selected. This provides an acceptable bolt spacing. What load factor n results from this selection?



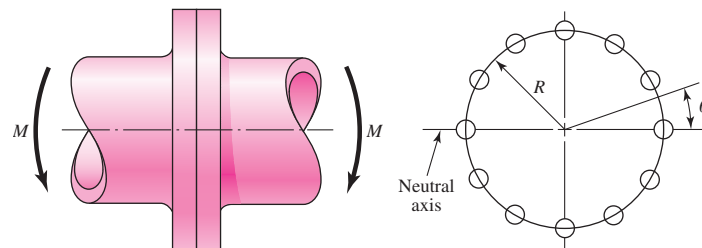
¹¹Russell, Burdsall & Ward, Inc., Metal Forming Specialists, Mentor, Ohio.

- 8-21** The computer can be very helpful to the engineer. In matters of analysis it can take the drudgery out of calculations and improve accuracy. In synthesis, good programming is a matter of organizing decisions that must be made, soliciting them while displaying enough information, accepting them, and doing the number crunching. In either case, one cannot program what one does not understand. Understanding comes from experience with problems executed manually. It is useful to program the protocol of Table 8-7 because it is so easy to make a mistake in longhand. Focusing on the fastener, recognize two situations: (1) the fastener has been chosen, its diameter and length are known, and the designer needs to know all the pertinent dimensions, including the effective grip of a cap-screw joint and whether the length is adequate; and (2) the fastener diameter, nut, and washers are chosen, and the designer has to make the length decision, after which documentation of pertinent dimensions is in order. Code the protocol of Table 8-7, bearing in mind that you may wish to embed some of it in a larger program.
- 8-22** Figure P8-20 illustrates the connection of a cylinder head to a pressure vessel using 10 bolts and a confined-gasket seal. The effective sealing diameter is 150 mm. Other dimensions are: $A = 100$, $B = 200$, $C = 300$, $D = 20$, and $E = 25$, all in millimeters. The cylinder is used to store gas at a static pressure of 6 MPa. ISO class 8.8 bolts with a diameter of 12 mm have been selected. This provides an acceptable bolt spacing. What load factor n results from this selection?
- 8-23** We wish to alter the figure for Prob. 8-22 by decreasing the inside diameter of the seal to the diameter $A = 100$ mm. This makes an effective sealing diameter of 120 mm. Then, by using cap screws instead of bolts, the bolt circle diameter B can be reduced as well as the outside diameter C . If the same bolt spacing and the same edge distance are used, then eight 12-mm cap screws can be used on a bolt circle with $B = 160$ mm and an outside diameter of 260 mm, a substantial savings. With these dimensions and all other data the same as in Prob. 8-22, find the load factor.
- 8-24** In the figure for Prob. 8-20, the bolts have a diameter of $\frac{1}{2}$ in and the cover plate is steel, with $D = \frac{1}{2}$ in. The cylinder is cast iron, with $E = \frac{5}{8}$ in and a modulus of elasticity of 18 Mpsi. The $\frac{1}{2}$ -in SAE washer to be used under the nut has OD = 1.062 in and is 0.095 in thick. Find the stiffnesses of the bolt and the members and the joint constant C .
- 8-25** The same as Prob. 8-24, except that $\frac{1}{2}$ -in cap screws are used with washers (see Fig. 8-21).
- 8-26** In addition to the data of Prob. 8-24, the dimensions of the cylinder are $A = 3.5$ in and an effective seal diameter of 4.25 in. The internal static pressure is 1500 psi. The outside diameter of the head is $C = 8$ in. The diameter of the bolt circle is 6 in, and so a bolt spacing in the range of 3 to 5 bolt diameters would require from 8 to 13 bolts. Select 10 SAE grade 5 bolts and find the resulting load factor n .
- 8-27** A $\frac{3}{8}$ -in class 5 cap screw and steel washer are used to secure a cap to a cast-iron frame of a machine having a blind threaded hole. The washer is 0.065 in thick. The frame has a modulus of elasticity of 14 Mpsi and is $\frac{1}{4}$ in thick. The screw is 1 in long. The material in the frame also has a modulus of elasticity of 14 Mpsi. Find the stiffnesses k_b and k_m of the bolt and members.
- 8-28** Bolts distributed about a bolt circle are often called upon to resist an external bending moment as shown in the figure. The external moment is 12 kip · in and the bolt circle has a diameter of 8 in. The neutral axis for bending is a diameter of the bolt circle. What needs to be determined is the most severe external load seen by a bolt in the assembly.
- (a) View the effect of the bolts as placing a line load around the bolt circle whose intensity F'_b , in pounds per inch, varies linearly with the distance from the neutral axis according to the relation $F'_b = F'_{b,\max} R \sin \theta$. The load on any particular bolt can be viewed as the effect of the line load over the arc associated with the bolt. For example, there are 12 bolts shown

in the figure. Thus each bolt load is assumed to be distributed on a 30° arc of the bolt circle. Under these conditions, what is the largest bolt load?

- View the largest load as the intensity $F'_{b,\max}$ multiplied by the arc length associated with each bolt and find the largest bolt load.
- Express the load on any bolt as $F = F_{\max} \sin \theta$, sum the moments due to all the bolts, and estimate the largest bolt load. Compare the results of these three approaches to decide how to attack such problems in the future.

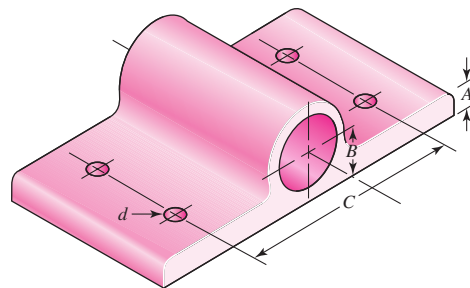
Problem 8–28
Bolted connection subjected to bending.



8–29

The figure shows a cast-iron bearing block that is to be bolted to a steel ceiling joist and is to support a gravity load. Bolts used are M20 ISO 8.8 with coarse threads and with 3.4-mm-thick steel washers under the bolt head and nut. The joist flanges are 20 mm in thickness, and the dimension A , shown in the figure, is 20 mm. The modulus of elasticity of the bearing block is 135 GPa.

Problem 8–29



- Find the wrench torque required if the fasteners are lubricated during assembly and the joint is to be permanent.
- Determine the load factor for the design if the gravity load is 15 kN.

8–30

The upside-down steel A frame shown in the figure is to be bolted to steel beams on the ceiling of a machine room using ISO grade 8.8 bolts. This frame is to support the 40-kN radial load as illustrated. The total bolt grip is 48 mm, which includes the thickness of the steel beam, the A-frame feet, and the steel washers used. The bolts are size M20 \times 2.5.

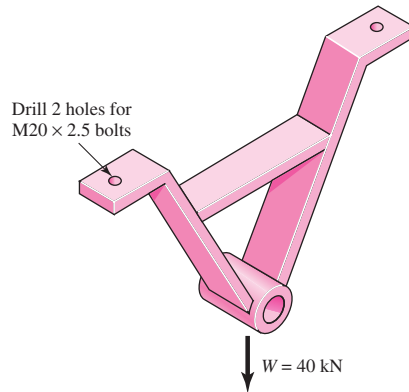
- What tightening torque should be used if the connection is permanent and the fasteners are lubricated?
- What portion of the external load is taken by the bolts? By the members?

8–31

If the pressure in Prob. 8–20 is cycling between 0 and 6 MPa, determine the fatigue factor of safety using the:

- Goodman criterion.
- Gerber criterion.
- ASME-elliptic criterion.

Problem 8–30



8–32 In the figure for Prob. 8–20, let $A = 0.9 \text{ m}$, $B = 1 \text{ m}$, $C = 1.10 \text{ m}$, $D = 20 \text{ mm}$, and $E = 25 \text{ mm}$. The cylinder is made of ASTM No. 35 cast iron ($E = 96 \text{ GPa}$), and the head, of low-carbon steel. There are thirty-six $M10 \times 1.5$ ISO 10.9 bolts tightened to 75 percent of proof load. During use, the cylinder pressure fluctuates between 0 and 550 kPa. Find the factor of safety guarding against a fatigue failure of a bolt using the:

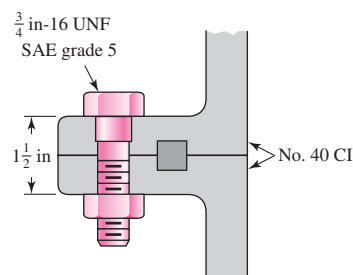
- Goodman criterion.
- Gerber criterion.
- ASME-elliptic criterion.

8–33 A 1-in-diameter hot-rolled AISI 1144 steel rod is hot-formed into an eyebolt similar to that shown in the figure for Prob. 3–74, with an inner 2-in-diameter eye. The threads are 1 in-12 UNF and are die-cut.

- For a repeatedly applied load collinear with the thread axis, using the Gerber criterion is fatigue failure more likely in the thread or in the eye?
- What can be done to strengthen the bolt at the weaker location?
- If the factor of safety guarding against a fatigue failure is $n_f = 2$, what repeatedly applied load can be applied to the eye?

8–34 The section of the sealed joint shown in the figure is loaded by a repeated force $P = 6 \text{ kip}$. The members have $E = 16 \text{ Mpsi}$. All bolts have been carefully preloaded to $F_i = 25 \text{ kip}$ each.

Problem 8–34

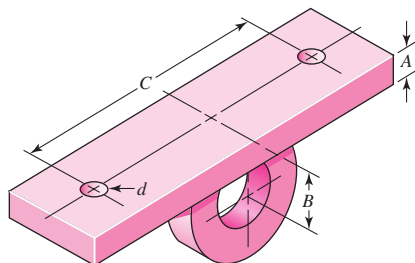


- If hardened-steel washers 0.134 in thick are to be used under the head and nut, what length of bolts should be used?
- Find k_b , k_m , and C .
- Using the Goodman criterion, find the factor of safety guarding against a fatigue failure.
- Using the Gerber criterion, find the factor of safety guarding against a fatigue failure.
- Find the load factor guarding against overproof loading.

8–35

Suppose the welded steel bracket shown in the figure is bolted underneath a structural-steel ceiling beam to support a fluctuating vertical load imposed on it by a pin and yoke. The bolts are $\frac{1}{2}$ in coarse-thread SAE grade 5, tightened to recommended preload. The stiffnesses have already been computed and are $k_b = 4.94$ Mlb/in and $k_m = 15.97$ Mlb/in.

Problem 8–35



- Assuming that the bolts, rather than the welds, govern the strength of this design, determine the safe repeated load P that can be imposed on this assembly using the Goodman criterion and a fatigue design factor of 2.
- Repeat part (a) using the Gerber criterion.
- Compute the load factors based on the load found in part (b).

8–36

Using the Gerber fatigue criterion and a fatigue-design factor of 2, determine the external repeated load P that a $1\frac{1}{4}$ -in SAE grade 5 coarse-thread bolt can take compared with that for a fine-thread bolt. The joint constants are $C = 0.30$ for coarse- and 0.32 for fine-thread bolts.

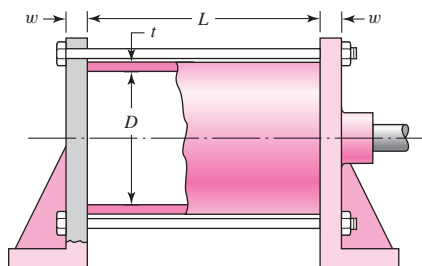
8–37

An $M30 \times 3.5$ ISO 8.8 bolt is used in a joint at recommended preload, and the joint is subjected to a repeated tensile fatigue load of $P = 80$ kN per bolt. The joint constant is $C = 0.33$. Find the load factors and the factor of safety guarding against a fatigue failure based on the Gerber fatigue criterion.

8–38

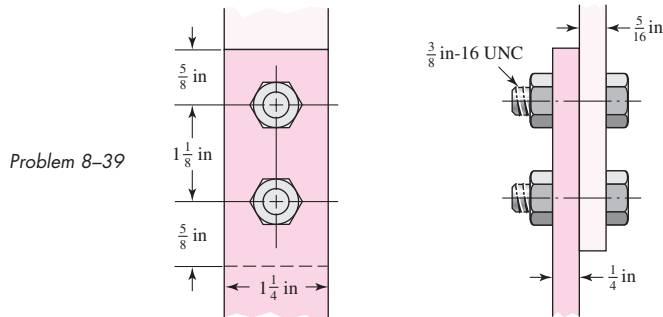
The figure shows a fluid-pressure linear actuator (hydraulic cylinder) in which $D = 4$ in, $t = \frac{3}{8}$ in, $L = 12$ in, and $w = \frac{3}{4}$ in. Both brackets as well as the cylinder are of steel. The actuator has been designed for a working pressure of 2000 psi. Six $\frac{3}{8}$ -in SAE grade 5 coarse-thread bolts are used, tightened to 75 percent of proof load.

Problem 8–38

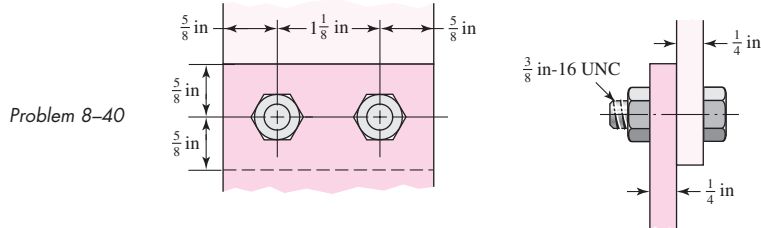


- Find the stiffnesses of the bolts and members, assuming that the entire cylinder is compressed uniformly and that the end brackets are perfectly rigid.
- Using the Goodman fatigue criterion, find the factor of safety guarding against a fatigue failure.
- Repeat part (b) using the Gerber fatigue criterion.
- What pressure would be required to cause total joint separation?

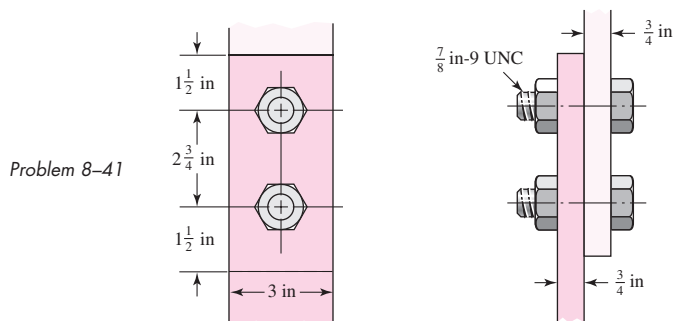
- 8–39** The figure shows a bolted lap joint that uses SAE grade 8 bolts. The members are made of cold-drawn AISI 1040 steel. Find the safe tensile shear load F that can be applied to this connection if the following factors of safety are specified: shear of bolts 3, bearing on bolts 2, bearing on members 2.5, and tension of members 3.



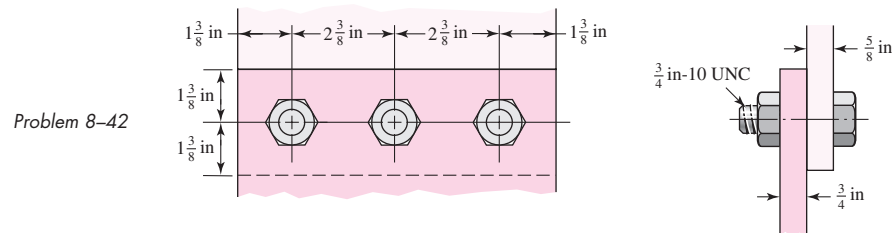
- 8–40** The bolted connection shown in the figure uses SAE grade 5 bolts. The members are hot-rolled AISI 1018 steel. A tensile shear load $F = 4000$ lbf is applied to the connection. Find the factor of safety for all possible modes of failure.



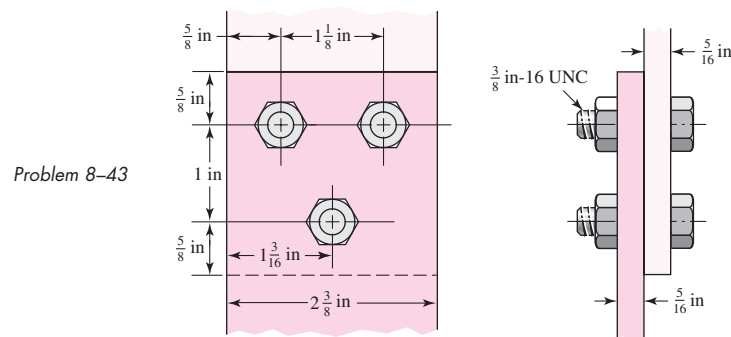
- 8–41** A bolted lap joint using SAE grade 5 bolts and members made of cold-drawn SAE 1040 steel is shown in the figure. Find the tensile shear load F that can be applied to this connection if the following factors of safety are specified: shear of bolts 1.8, bearing on bolts 2.2, bearing on members 2.4, and tension of members 2.6.



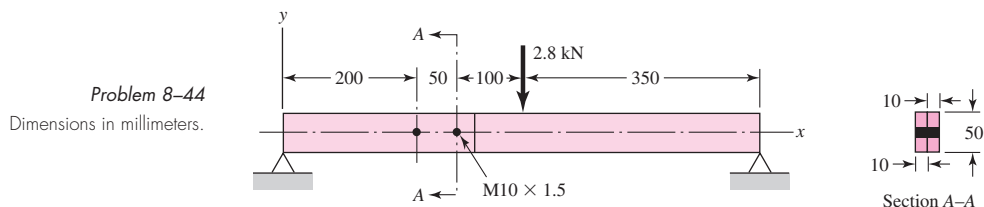
- 8–42** The bolted connection shown in the figure is subjected to a tensile shear load of 20 kip. The bolts are SAE grade 5 and the material is cold-drawn AISI 1015 steel. Find the factor of safety of the connection for all possible modes of failure.



- 8–43** The figure shows a connection that employs three SAE grade 5 bolts. The tensile shear load on the joint is 5400 lbf. The members are cold-drawn bars of AISI 1020 steel. Find the factor of safety for each possible mode of failure.



- 8–44** A beam is made up by bolting together two cold-drawn bars of AISI 1018 steel as a lap joint, as shown in the figure. The bolts used are ISO 5.8. Ignoring any twisting, determine the factor of safety of the connection.



- 8–45** Standard design practice, as exhibited by the solutions to Probs. 8–39 to 8–43, is to assume that the bolts, or rivets, share the shear equally. For many situations, such an assumption may lead to an unsafe design. Consider the yoke bracket of Prob. 8–35, for example. Suppose this bracket is bolted to a wide-flange *column* with the centerline through the two bolts in the vertical direction. A vertical load through the yoke-pin hole at distance B from the column flange would place a shear load on the bolts as well as a tensile load. The tensile load comes about because the bracket tends to pry itself about the bottom corner, much like a claw hammer, exerting a large tensile load on the upper bolt. In addition, it is almost certain that both the spacing of the bolt holes and their diameters will be slightly different on the column flange from what they are on the yoke bracket. Thus, unless yielding occurs, only one of the bolts will take the shear load. The designer has no way of knowing which bolt this will be.

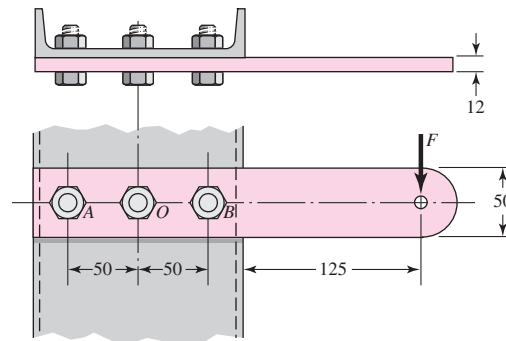
In this problem the bracket is 8 in long, $A = \frac{1}{2}$ in, $B = 3$ in, $C = 6$ in, and the column flange is $\frac{1}{2}$ in thick. The bolts are $\frac{1}{2}$ in UNC SAE 5. Steel washers 0.095 in thick are used under the nuts. The nuts are tightened to 75 percent of proof load. The vertical yoke-pin load is 3000 lbf. If the upper bolt takes all the shear load as well as the tensile load, how closely does the bolt stress approach the proof strength?

8-46 The bearing of Prob. 8-29 is bolted to a vertical surface and supports a horizontal shaft. The bolts used have coarse threads and are M20 ISO 5.8. The joint constant is $C = 0.30$, and the dimensions are $A = 20$ mm, $B = 50$ mm, and $C = 160$ mm. The bearing base is 240 mm long. The bearing load is 12 kN. If the bolts are tightened to 75 percent of proof load, will the bolt stress exceed the proof strength? Use worst-case loading, as discussed in Prob. 8-45.

8-47 A split-ring clamp-type shaft collar such as is described in Prob. 5-31 must resist an axial load of 1000 lbf. Using a design factor of $n = 3$ and a coefficient of friction of 0.12, specify an SAE Grade 5 cap screw using fine threads. What wrench torque should be used if a lubricated screw is used?

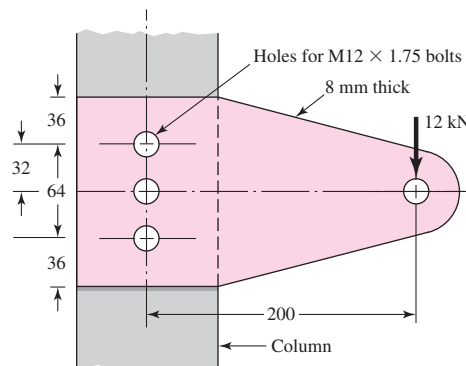
8-48 A vertical channel 152×76 (see Table A-7) has a cantilever beam bolted to it as shown. The channel is hot-rolled AISI 1006 steel. The bar is of hot-rolled AISI 1015 steel. The shoulder bolts are $M12 \times 1.75$ ISO 5.8. For a design factor of 2.8, find the safe force F that can be applied to the cantilever.

Problem 8-48
Dimensions in millimeters.

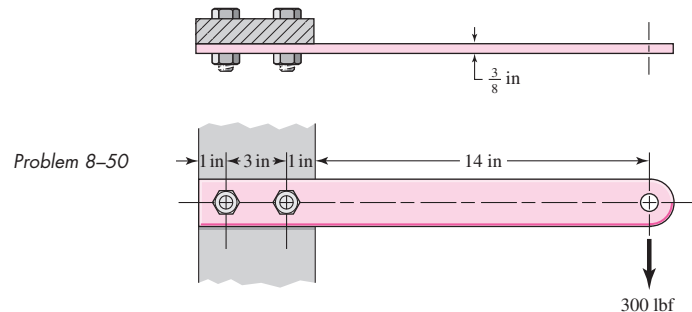


8-49 Find the total shear load on each of the three bolts for the connection shown in the figure and compute the significant bolt shear stress and bearing stress. Find the second moment of area of the 8-mm plate on a section through the three bolt holes, and find the maximum bending stress in the plate.

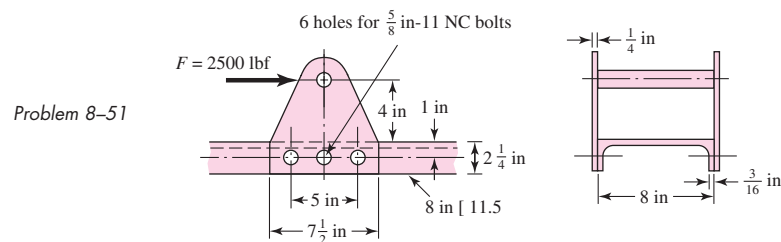
Problem 8-49
Dimensions in millimeters.



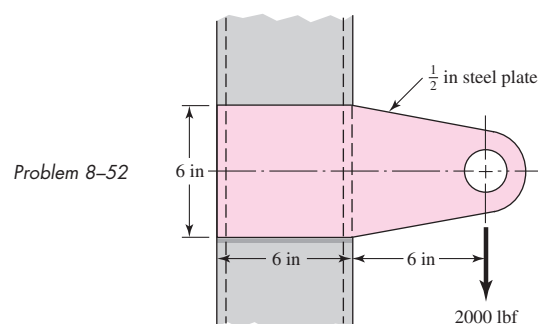
- 8-50** A $\frac{3}{8}$ -in \times 2-in AISI 1018 cold-drawn steel bar is cantilevered to support a static load of 300 lbf as illustrated. The bar is secured to the support using two $\frac{1}{2}$ -in-13 UNC SAE 5 bolts. Find the factor of safety for the following modes of failure: shear of bolt, bearing on bolt, bearing on member, and strength of member.



- 8-51** The figure shows a welded fitting which has been tentatively designed to be bolted to a channel so as to transfer the 2500-lbf load into the channel. The channel is made of hot-rolled low-carbon steel having a minimum yield strength of 46 kpsi; the two fitting plates are of hot-rolled stock having a minimum S_y of 45.5 kpsi. The fitting is to be bolted using six SAE grade 2 shoulder bolts. Check the strength of the design by computing the factor of safety for all possible modes of failure.



- 8-52** A cantilever is to be attached to the flat side of a 6-in, 13.0-lbf/in channel used as a column. The cantilever is to carry a load as shown in the figure. To a designer the choice of a bolt array is usually an a priori decision. Such decisions are made from a background of knowledge of the effectiveness of various patterns.



- (a) If two fasteners are used, should the array be arranged vertically, horizontally, or diagonally? How would you decide?
- (b) If three fasteners are used, should a linear or triangular array be used? For a triangular array, what should be the orientation of the triangle? How would you decide?

8-53 Using your experience with Prob. 8-52, specify a bolt pattern for Prob. 8-52, and size the bolts.

8-54 Determining the joint stiffness of nonsymmetric joints of two or more different materials using a frustum of a hollow cone can be time-consuming and prone to error. Develop a computer program to determine k_m for a joint composed of two different materials of differing thickness. Test the program to determine k_m for problems such as Ex. 8-5 and Probs. 8-19, 8-20, 8-22, 8-24, and 8-27.



Welding, Bonding, and the Design of Permanent Joints

Chapter Outline

- 9-1** Welding Symbols **458**
- 9-2** Butt and Fillet Welds **460**
- 9-3** Stresses in Welded Joints in Torsion **464**
- 9-4** Stresses in Welded Joints in Bending **469**
- 9-5** The Strength of Welded Joints **471**
- 9-6** Static Loading **474**
- 9-7** Fatigue Loading **478**
- 9-8** Resistance Welding **480**
- 9-9** Adhesive Bonding **480**

Form can more readily pursue function with the help of joining processes such as welding, brazing, soldering, cementing, and gluing—processes that are used extensively in manufacturing today. Whenever parts have to be assembled or fabricated, there is usually good cause for considering one of these processes in preliminary design work. Particularly when sections to be joined are thin, one of these methods may lead to significant savings. The elimination of individual fasteners, with their holes and assembly costs, is an important factor. Also, some of the methods allow rapid machine assembly, furthering their attractiveness.

Riveted permanent joints were common as the means of fastening rolled steel shapes to one another to form a permanent joint. The childhood fascination of seeing a cherry-red hot rivet thrown with tongs across a building skeleton to be unerringly caught by a person with a conical bucket, to be hammered pneumatically into its final shape, is all but gone. Two developments relegated riveting to lesser prominence. The first was the development of high-strength steel bolts whose preload could be controlled. The second was the improvement of welding, competing both in cost and in latitude of possible form.

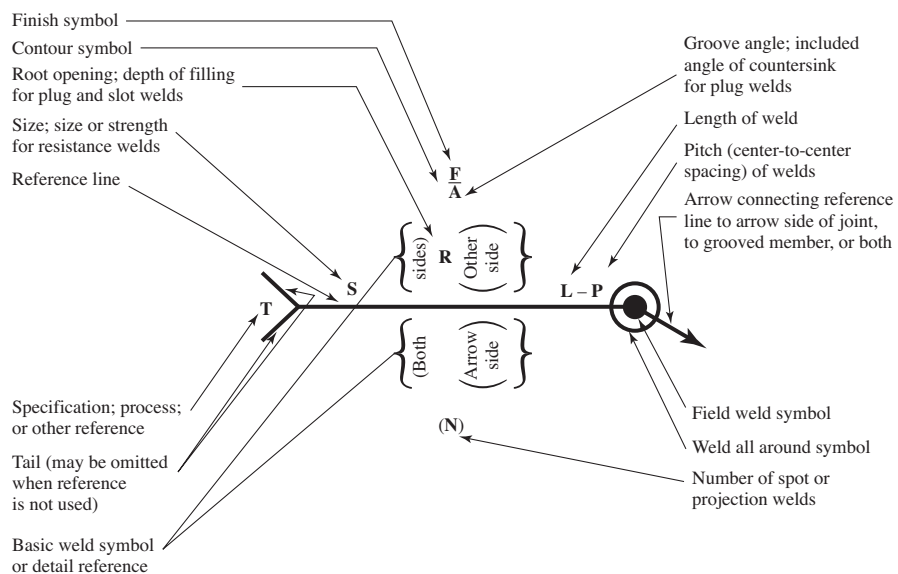
9-1 Welding Symbols

A weldment is fabricated by welding together a collection of metal shapes, cut to particular configurations. During welding, the several parts are held securely together, often by clamping or jigging. The welds must be precisely specified on working drawings, and this is done by using the welding symbol, shown in Fig. 9-1, as standardized by the American Welding Society (AWS). The arrow of this symbol points to the joint to be welded. The body of the symbol contains as many of the following elements as are deemed necessary:

- Reference line
- Arrow

Figure 9-1

The AWS standard welding symbol showing the location of the symbol elements.



- Basic weld symbols as in Fig. 9–2
- Dimensions and other data
- Supplementary symbols
- Finish symbols
- Tail
- Specification or process

The *arrow side* of a joint is the line, side, area, or near member to which the arrow points. The side opposite the arrow side is the *other side*.

Figures 9–3 to 9–6 illustrate the types of welds used most frequently by designers. For general machine elements most welds are fillet welds, though butt welds are used a great deal in designing pressure vessels. Of course, the parts to be joined must be arranged so that there is sufficient clearance for the welding operation. If unusual joints are required because of insufficient clearance or because of the section shape, the design may be a poor one and the designer should begin again and endeavor to synthesize another solution.

Since heat is used in the welding operation, there are metallurgical changes in the parent metal in the vicinity of the weld. Also, residual stresses may be introduced because of clamping or holding or, sometimes, because of the order of welding. Usually these

Figure 9–2

Arc- and gas-weld symbols.

Type of weld							
Bead	Fillet	Plug or slot	Groove				
			Square	V	Bevel	U	J

Figure 9–3

Fillet welds. (a) The number indicates the leg size; the arrow should point only to one weld when both sides are the same. (b) The symbol indicates that the welds are intermittent and staggered 60 mm along on 200-mm centers.

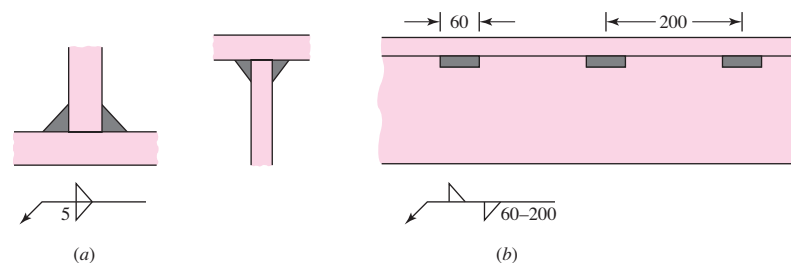


Figure 9–4

The circle on the weld symbol indicates that the welding is to go all around.

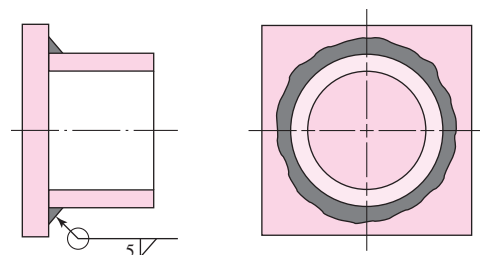


Figure 9-5

Butt or groove welds:
(a) square butt-welded on both
sides; (b) single V with 60°
bevel and root opening of
2 mm; (c) double V; (d) single
bevel.

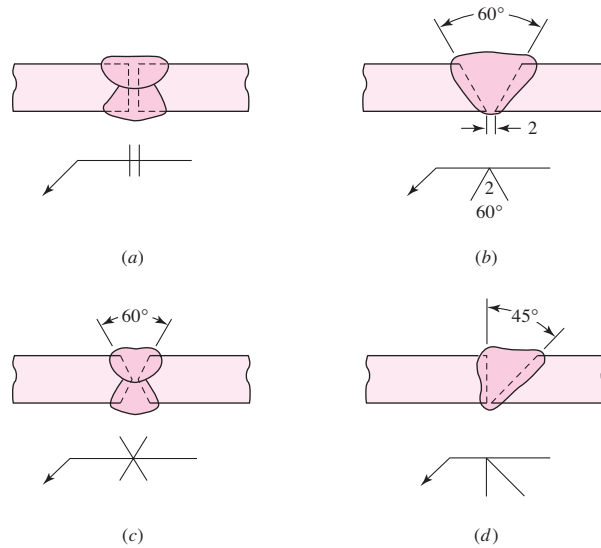
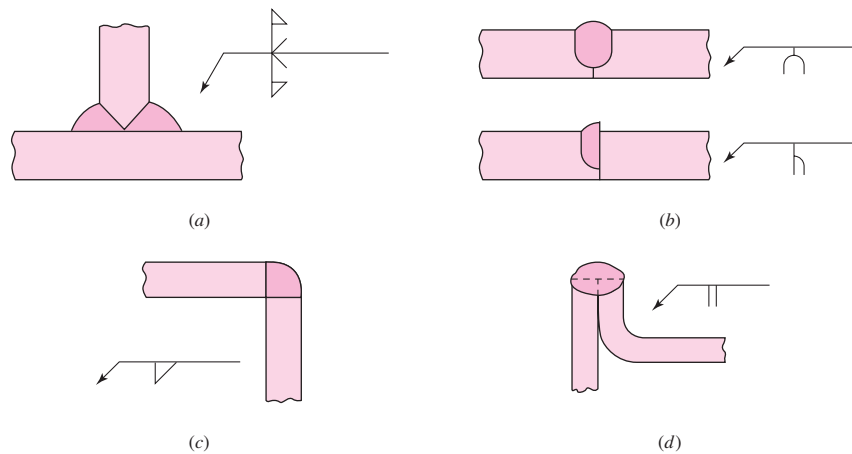


Figure 9-6

Special groove welds: (a) T
joint for thick plates; (b) U and
J welds for thick plates;
(c) corner weld (may also
have a bead weld on inside
for greater strength but should
not be used for heavy loads);
(d) edge weld for sheet metal
and light loads.



residual stresses are not severe enough to cause concern; in some cases a light heat treatment after welding has been found helpful in relieving them. When the parts to be welded are thick, a preheating will also be of benefit. If the reliability of the component is to be quite high, a testing program should be established to learn what changes or additions to the operations are necessary to ensure the best quality.

9-2 Butt and Fillet Welds

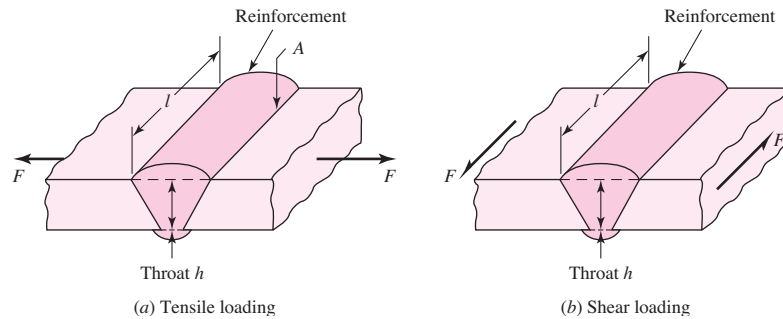
Figure 9-7a shows a single V-groove weld loaded by the tensile force F . For either tension or compression loading, the average normal stress is

$$\sigma = \frac{F}{hl} \quad (9-1)$$

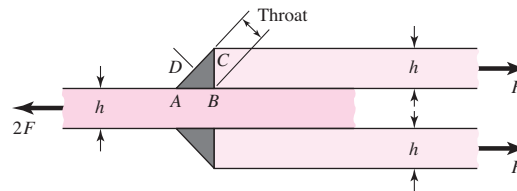
where h is the weld throat and l is the length of the weld, as shown in the figure. Note that the value of h does not include the reinforcement. The reinforcement can be desirable, but it varies somewhat and does produce stress concentration at point A in the figure. If fatigue loads exist, it is good practice to grind or machine off the reinforcement.

Figure 9-7

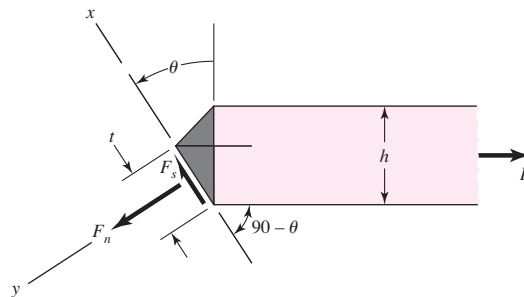
A typical butt joint.

**Figure 9-8**

A transverse fillet weld.

**Figure 9-9**

Free body from Fig. 9-8.



The average stress in a butt weld due to shear loading (Fig. 9-7*b*) is

$$\tau = \frac{F}{hl} \quad (9-2)$$

Figure 9-8 illustrates a typical transverse fillet weld. In Fig. 9-9 a portion of the welded joint has been isolated from Fig. 9-8 as a free body. At angle θ the forces on each weldment consist of a normal force F_n and a shear force F_s . Summing forces in the x and y directions gives

$$F_s = F \sin \theta \quad (a)$$

$$F_n = F \cos \theta \quad (b)$$

Using the law of sines for the triangle in Fig. 9-9 yields

$$\frac{t}{\sin 45^\circ} = \frac{h}{\sin(90^\circ - \theta + 45^\circ)} = \frac{h}{\sin(135^\circ - \theta)} = \frac{\sqrt{2}h}{\cos \theta + \sin \theta}$$

Solving for the throat length t gives

$$t = \frac{h}{\cos \theta + \sin \theta} \quad (c)$$

The nominal stresses at the angle θ in the weldment, τ and σ , are

$$\tau = \frac{F_s}{A} = \frac{F \sin \theta (\cos \theta + \sin \theta)}{hl} = \frac{F}{hl} (\sin \theta \cos \theta + \sin^2 \theta) \quad (d)$$

$$\sigma = \frac{F_n}{A} = \frac{F \cos \theta (\cos \theta + \sin \theta)}{hl} = \frac{F}{hl} (\cos^2 \theta + \sin \theta \cos \theta) \quad (e)$$

The von Mises stress σ' at angle θ is

$$\sigma' = (\sigma^2 + 3\tau^2)^{1/2} = \frac{F}{hl} [(\cos^2 \theta + \sin \theta \cos \theta)^2 + 3(\sin^2 \theta + \sin \theta \cos \theta)^2]^{1/2} \quad (f)$$

The largest von Mises stress occurs at $\theta = 62.5^\circ$ with a value of $\sigma' = 2.16F/(hl)$. The corresponding values of τ and σ are $\tau = 1.196F/(hl)$ and $\sigma = 0.623F/(hl)$.

The maximum shear stress can be found by differentiating Eq. (d) with respect to θ and equating to zero. The stationary point occurs at $\theta = 67.5^\circ$ with a corresponding $\tau_{\max} = 1.207F/(hl)$ and $\sigma = 0.5F/(hl)$.

There are some experimental and analytical results that are helpful in evaluating Eqs. (d) through (f) and consequences. A model of the transverse fillet weld of Fig. 9–8 is easily constructed for photoelastic purposes and has the advantage of a balanced loading condition. Norris constructed such a model and reported the stress distribution along the sides AB and BC of the weld.¹ An approximate graph of the results he obtained is shown as Fig. 9–10a. Note that stress concentration exists at A and B on the horizontal leg and at B on the vertical leg. Norris states that he could not determine the stresses at A and B with any certainty.

Salakian² presents data for the stress distribution across the throat of a fillet weld (Fig. 9–10b). This graph is of particular interest because we have just learned that it is the throat stresses that are used in design. Again, the figure shows stress concentration at point B . Note that Fig. 9–10a applies either to the weld metal or to the parent metal, and that Fig. 9–10b applies only to the weld metal.

Equations (a) through (f) and their consequences seem familiar, and we can become comfortable with them. The net result of photoelastic and finite element analysis of transverse fillet weld geometry is more like that shown in Fig. 9–10 than those given by mechanics of materials or elasticity methods. The most important concept here is that we have *no analytical approach that predicts the existing stresses*. The geometry of the fillet is crude by machinery standards, and even if it were ideal, the macrogeometry is too abrupt and complex for our methods. There are also subtle bending stresses due to eccentricities. Still, in the absence of robust analysis, weldments must be specified and the resulting joints must be safe. The approach has been to use a simple *and conservative* model, verified by testing as conservative. The approach has been to

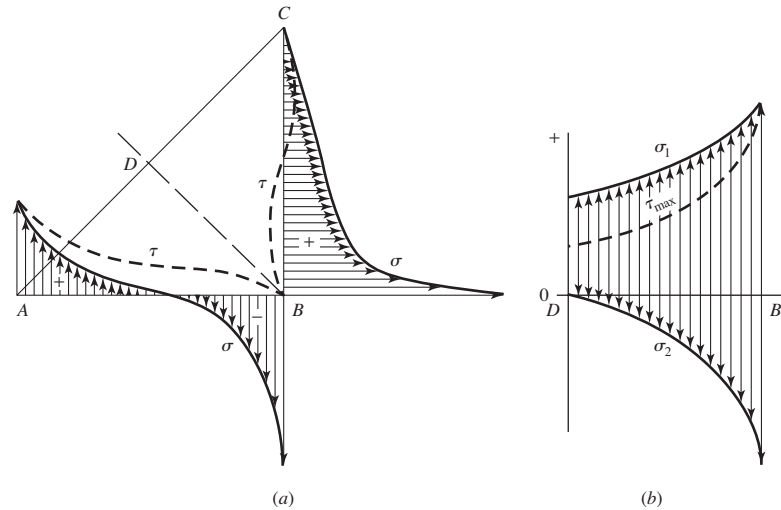
- Consider the external loading to be carried by shear forces on the throat area of the weld. By ignoring the normal stress on the throat, the shearing stresses are inflated sufficiently to render the model conservative.

¹C. H. Norris, "Photoelastic Investigation of Stress Distribution in Transverse Fillet Welds," *Welding J.*, vol. 24, 1945, p. 557s.

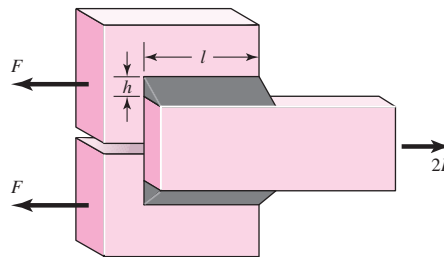
²A. G. Salakian and G. E. Claussen, "Stress Distribution in Fillet Welds: A Review of the Literature," *Welding J.*, vol. 16, May 1937, pp. 1–24.

Figure 9-10

Stress distribution in fillet welds: (a) stress distribution on the legs as reported by Norris; (b) distribution of principal stresses and maximum shear stress as reported by Salakian.

**Figure 9-11**

Parallel fillet welds.



- Use distortion energy for significant stresses.
- Circumscribe typical cases by code.

For this model, the basis for weld analysis or design employs

$$\tau = \frac{F}{0.707hl} = \frac{1.414F}{hl} \quad (9-3)$$

which assumes the entire force F is accounted for by a shear stress in the minimum throat area. Note that this inflates the maximum estimated shear stress by a factor of $1.414/1.207 = 1.17$. Further, consider the parallel fillet welds shown in Fig. 9-11 where, as in Fig. 9-8, each weld transmits a force F . However, in the case of Fig. 9-11, the maximum shear stress τ is at the minimum throat area and corresponds to Eq. (9-3).

Under circumstances of combined loading we

- Examine primary shear stresses due to external forces.
- Examine secondary shear stresses due to torsional and bending moments.
- Estimate the strength(s) of the parent metal(s).
- Estimate the strength of deposited weld metal.
- Estimate permissible load(s) for parent metal(s).
- Estimate permissible load for deposited weld metal.

9-3 Stresses in Welded Joints in Torsion

Figure 9-12 illustrates a cantilever of length l welded to a column by two fillet welds. The reaction at the support of a cantilever always consists of a shear force V and a moment M . The shear force produces a *primary shear* in the welds of magnitude

$$\tau' = \frac{V}{A} \quad (9-4)$$

where A is the throat area of all the welds.

The moment at the support produces *secondary shear* or *torsion* of the welds, and this stress is given by the equation

$$\tau'' = \frac{Mr}{J} \quad (9-5)$$

where r is the distance from the centroid of the weld group to the point in the weld of interest and J is the second polar moment of area of the weld group about the centroid of the group. When the sizes of the welds are known, these equations can be solved and the results combined to obtain the maximum shear stress. Note that r is usually the farthest distance from the centroid of the weld group.

Figure 9-13 shows two welds in a group. The rectangles represent the throat areas of the welds. Weld 1 has a throat width $b_1 = 0.707h_1$, and weld 2 has a throat width $d_2 = 0.707h_2$. Note that h_1 and h_2 are the respective weld sizes. The throat area of both welds together is

$$A = A_1 + A_2 = b_1d_1 + b_2d_2 \quad (a)$$

This is the area that is to be used in Eq. (9-4).

The x axis in Fig. 9-13 passes through the centroid G_1 of weld 1. The second moment of area about this axis is

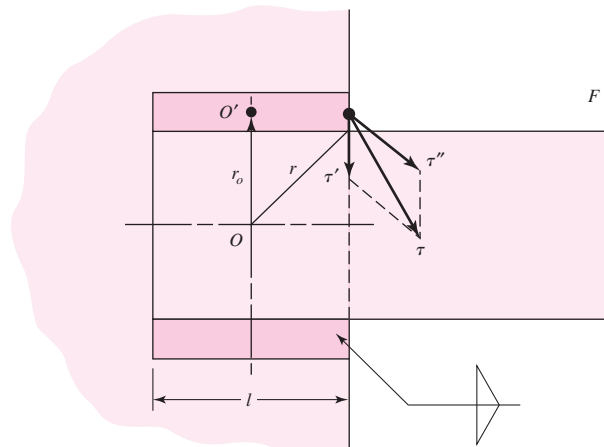
$$I_x = \frac{b_1d_1^3}{12}$$

Similarly, the second moment of area about an axis through G_1 parallel to the y axis is

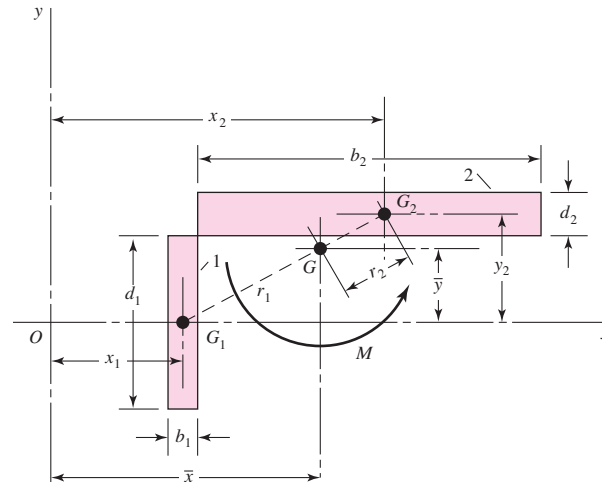
$$I_y = \frac{d_1b_1^3}{12}$$

Figure 9-12

This is a *moment connection*; such a connection produces *torsion* in the welds.



| Figure 9-13



Thus the second polar moment of area of weld 1 about its own centroid is

$$J_{G1} = I_x + I_y = \frac{b_1 d_1^3}{12} + \frac{d_1 b_1^3}{12} \quad (b)$$

In a similar manner, the second polar moment of area of weld 2 about its centroid is

$$J_{G2} = \frac{b_2 d_2^3}{12} + \frac{d_2 b_2^3}{12} \quad (c)$$

The centroid G of the weld group is located at

$$\bar{x} = \frac{A_1 x_1 + A_2 x_2}{A} \quad \bar{y} = \frac{A_1 y_1 + A_2 y_2}{A}$$

Using Fig. 9-13 again, we see that the distances r_1 and r_2 from G_1 and G_2 to G , respectively, are

$$r_1 = [(\bar{x} - x_1)^2 + \bar{y}^2]^{1/2} \quad r_2 = [(y_2 - \bar{y})^2 + (x_2 - \bar{x})^2]^{1/2}$$

Now, using the parallel-axis theorem, we find the second polar moment of area of the weld group to be

$$J = (J_{G1} + A_1 r_1^2) + (J_{G2} + A_2 r_2^2) \quad (d)$$

This is the quantity to be used in Eq. (9-5). The distance r must be measured from G and the moment M computed about G .

The reverse procedure is that in which the allowable shear stress is given and we wish to find the weld size. The usual procedure is to estimate a probable weld size and then to use iteration.

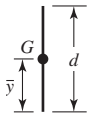
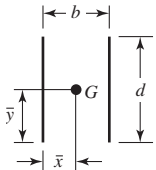
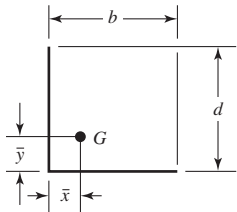
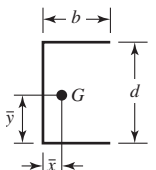
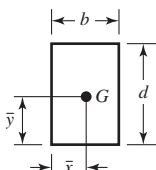
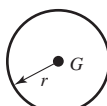
Observe in Eqs. (b) and (c) the quantities b_1^3 and d_2^3 , respectively, which are the cubes of the weld widths. These quantities are small and can be neglected. This leaves the terms $b_1 d_1^3/12$ and $d_2 b_2^3/12$, which make J_{G1} and J_{G2} linear in the weld width. Setting the weld widths b_1 and d_2 to unity leads to the idea of treating each fillet weld as a line. The resulting second moment of area is then a *unit second polar moment of area*. The advantage of treating the weld size as a line is that the value of J_u is the same regardless of the weld size. Since the throat width of a fillet weld is $0.707h$, the relationship between J and the unit value is

$$J = 0.707h J_u \quad (9-6)$$

in which J_u is found by conventional methods for an area having unit width. The transfer formula for J_u must be employed when the welds occur in groups, as in Fig. 9–12. Table 9–1 lists the throat areas and the unit second polar moments of area for the most common fillet welds encountered. The example that follows is typical of the calculations normally made.

Table 9-1

Torsional Properties of Fillet Welds*

Weld	Throat Area	Location of G	Unit Second Polar Moment of Area
	$A = 0.70 hd$	$\bar{x} = 0$ $\bar{y} = d/2$	$J_u = d^3/12$
	$A = 1.41 hd$	$\bar{x} = b/2$ $\bar{y} = d/2$	$J_u = \frac{d(3b^2 + d^2)}{6}$
	$A = 0.707h(2b + d)$	$\bar{x} = \frac{b^2}{2(b+d)}$ $\bar{y} = \frac{d^2}{2(b+d)}$	$J_u = \frac{(b+d)^4 - 6b^2d^2}{12(b+d)}$
	$A = 0.707h(2b + d)$	$\bar{x} = \frac{b^2}{2b+d}$ $\bar{y} = d/2$	$J_u = \frac{8b^3 + 6bd^2 + d^3}{12} - \frac{b^4}{2b+d}$
	$A = 1.414h(b + d)$	$\bar{x} = b/2$ $\bar{y} = d/2$	$J_u = \frac{(b+d)^3}{6}$
	$A = 1.414 \pi hr$		$J_u = 2\pi r^3$

* G is centroid of weld group; h is weld size; plane of torque couple is in the plane of the paper; all welds are of unit width.

EXAMPLE 9-1

A 50-kN load is transferred from a welded fitting into a 200-mm steel channel as illustrated in Fig. 9-14. Estimate the maximum stress in the weld.

Solution³

(a) Label the ends and corners of each weld by letter. Sometimes it is desirable to label each weld of a set by number. See Fig. 9-15.

(b) Estimate the primary shear stress τ' . As shown in Fig. 9-14, each plate is welded to the channel by means of three 6-mm fillet welds. Figure 9-15 shows that we have divided the load in half and are considering only a single plate. From case 4 of Table 9-1 we find the throat area as

$$A = 0.707(6)[2(56) + 190] = 1280 \text{ mm}^2$$

Then the primary shear stress is

$$\tau' = \frac{V}{A} = \frac{25(10)^3}{1280} = 19.5 \text{ MPa}$$

(c) Draw the τ' stress, to scale, at each lettered corner or end. See Fig. 9-16.

(d) Locate the centroid of the weld pattern. Using case 4 of Table 9-1, we find

$$\bar{x} = \frac{(56)^2}{2(56) + 190} = 10.4 \text{ mm}$$

This is shown as point O on Figs. 9-15 and 9-16.

Figure 9-14

Dimensions in millimeters.

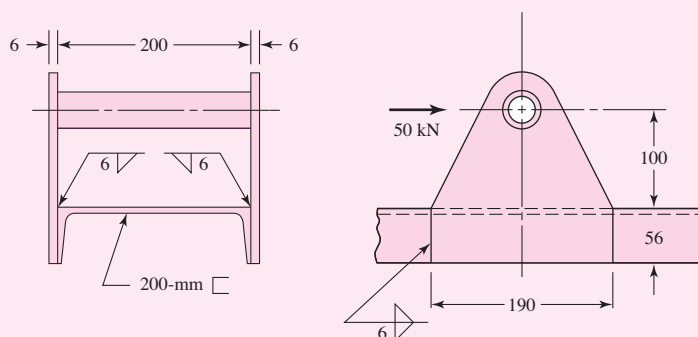
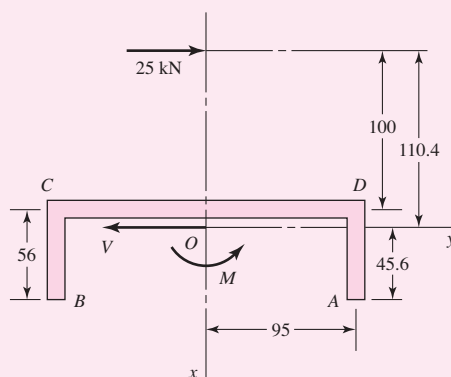
**Figure 9-15**

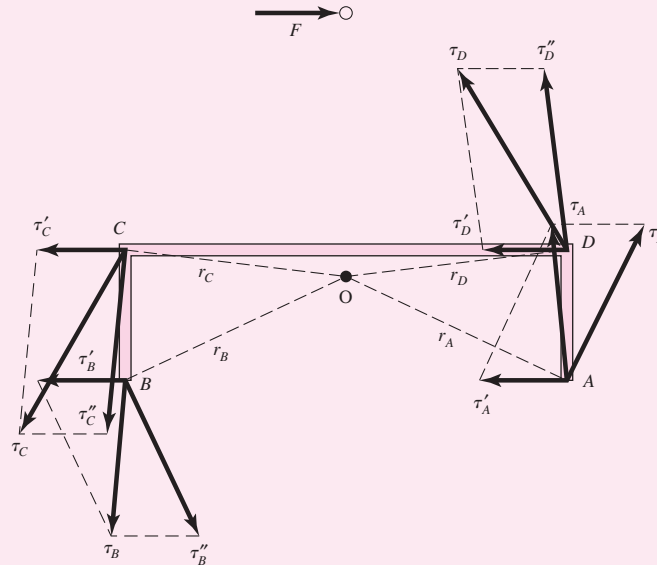
Diagram showing the weld geometry; all dimensions in millimeters. Note that V and M represent loads applied by the welds to the plate.



³We are indebted to Professor George Piotrowski of the University of Florida for the detailed steps, presented here, of his method of weld analysis R.G.B., J.K.N.

468 Mechanical Engineering Design

Figure 9-16

 Free-body diagram of one of
 the side plates.

 (e) Find the distances r_i (see Fig. 9-16):

$$r_A = r_B = [(190/2)^2 + (56 - 10.4)^2]^{1/2} = 105 \text{ mm}$$

$$r_C = r_D = [(190/2)^2 + (10.4)^2]^{1/2} = 95.6 \text{ mm}$$

These distances can also be scaled from the drawing.

 (f) Find J . Using case 4 of Table 9-1 again, we get

$$\begin{aligned} J &= 0.707(6) \left[\frac{8(56)^3 + 6(56)(190)^2 + (190)^3}{12} - \frac{(56)^4}{2(56) + 190} \right] \\ &= 7.07(10)^6 \text{ mm}^4 \end{aligned}$$

 (g) Find M :

$$M = Fl = 25(100 + 10.4) = 2760 \text{ N} \cdot \text{m}$$

 (h) Estimate the secondary shear stresses τ'' at each lettered end or corner:

$$\tau''_A = \tau''_B = \frac{Mr}{J} = \frac{2760(10)^3(105)}{7.07(10)^6} = 41.0 \text{ MPa}$$

$$\tau''_C = \tau''_D = \frac{2760(10)^3(95.6)}{7.07(10)^6} = 37.3 \text{ MPa}$$

 (i) Draw the τ'' stress, to scale, at each corner and end. See Fig. 9-16. Note that this is a free-body diagram of one of the side plates, and therefore the τ' and τ'' stresses represent what the channel is doing to the plate (through the welds) to hold the plate in equilibrium.

(j) At each letter, combine the two stress components as vectors. This gives

$$\tau_A = \tau_B = 37 \text{ MPa}$$

$$\tau_C = \tau_D = 44 \text{ MPa}$$

(k) Identify the most highly stressed point:

$$\tau_{\max} = \tau_C = \tau_D = 44 \text{ MPa}$$

Answer

9-4 Stresses in Welded Joints in Bending

Figure 9-17*a* shows a cantilever welded to a support by fillet welds at top and bottom. A free-body diagram of the beam would show a shear-force reaction V and a moment reaction M . The shear force produces a primary shear in the welds of magnitude

$$\tau' = \frac{V}{A} \quad (a)$$

where A is the total throat area.

The moment M induces a throat shear stress component of 0.707τ in the welds.⁴ Treating the two welds of Fig. 9-17*b* as lines we find the unit second moment of area to be

$$I_u = \frac{bd^2}{2} \quad (b)$$

The second moment of area I , based on weld throat area, is

$$I = 0.707hI_u = 0.707h \frac{bd^2}{2} \quad (c)$$

The nominal throat shear stress is now found to be

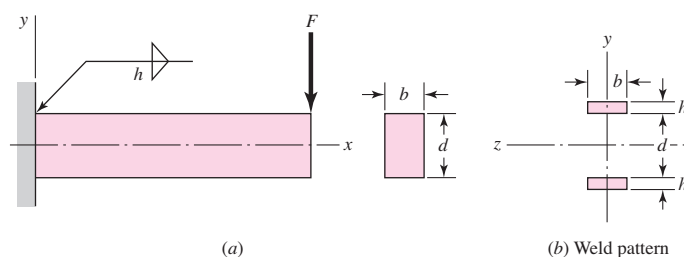
$$\tau = \frac{Mc}{I} = \frac{Md/2}{0.707hbd^2/2} = \frac{1.414M}{bdh} \quad (d)$$

The model gives the coefficient of 1.414, in contrast to the predictions of Sec. 9-2 of 1.197 from distortion energy, or 1.207 from maximum shear. The conservatism of the model's 1.414 is not that it is simply larger than either 1.196 or 1.207, but the tests carried out to validate the model show that it is large enough.

The second moment of area in Eq. (d) is based on the distance d between the two welds. If this moment is found by treating the two welds as having rectangular footprints, the distance between the weld throat centroids is approximately $(d + h)$. This would produce a slightly larger second moment of area, and result in a smaller level of stress. This method of treating welds as a line does not interfere with the conservatism of the model. It also makes Table 9-2 possible with all the conveniences that ensue.

Figure 9-17

A rectangular cross-section cantilever welded to a support at the top and bottom edges.



⁴According to the model described before Eq. (9-3), the moment is carried by components of the shear stress 0.707τ parallel to the x -axis of Fig. 9-17. The y components cancel.

Table 9-2

Bending Properties of Fillet Welds*

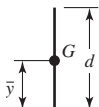
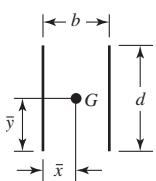
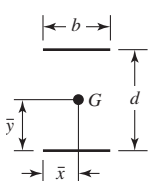
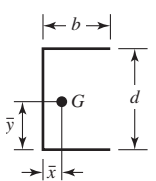
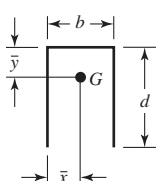
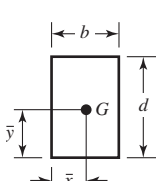
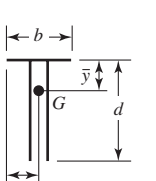
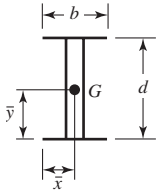

Weld	Throat Area	Location of G	Unit Second Moment of Area
	$A = 0.707hd$	$\bar{x} = 0$ $\bar{y} = d/2$	$I_u = \frac{d^3}{12}$
	$A = 1.414hd$	$\bar{x} = b/2$ $\bar{y} = d/2$	$I_u = \frac{d^3}{6}$
	$A = 1.414hd$	$\bar{x} = b/2$ $\bar{y} = d/2$	$I_u = \frac{bd^2}{2}$
	$A = 0.707h(2b + d)$	$\bar{x} = \frac{b^2}{2b + d}$ $\bar{y} = d/2$	$I_u = \frac{d^2}{12}(6b + d)$
	$A = 0.707h(b + 2d)$	$\bar{x} = b/2$ $\bar{y} = \frac{d^2}{b + 2d}$	$I_u = \frac{2d^3}{3} - 2d^2\bar{y} + (b + 2d)\bar{y}^2$
	$A = 1.414h(b + d)$	$\bar{x} = b/2$ $\bar{y} = d/2$	$I_u = \frac{d^2}{6}(3b + d)$
	$A = 0.707h(b + 2d)$	$\bar{x} = b/2$ $\bar{y} = \frac{d^2}{b + 2d}$	$I_u = \frac{2d^3}{3} - 2d^2\bar{y} + (b + 2d)\bar{y}^2$

Table 9-2

Continued

Weld	Throat Area	Location of G	Unit Second Moment of Area
	$A = 1.414h(b + d)$	$\bar{x} = b/2$ $\bar{y} = d/2$	$I_u = \frac{d^2}{6}(3b + d)$
	$A = 1.414\pi hr$		$I_u = \pi r^3$

* I_u , unit second moment of area, is taken about a horizontal axis through G , the centroid of the weld group, h is weld size; the plane of the bending couple is normal to the plane of the paper and parallel to the y -axis; all welds are of the same size.

9-5 The Strength of Welded Joints

The matching of the electrode properties with those of the parent metal is usually not so important as speed, operator appeal, and the appearance of the completed joint. The properties of electrodes vary considerably, but Table 9-3 lists the minimum properties for some electrode classes.

It is preferable, in designing welded components, to select a steel that will result in a fast, economical weld even though this may require a sacrifice of other qualities such as machinability. Under the proper conditions, all steels can be welded, but best results will be obtained if steels having a UNS specification between G10140 and G10230 are chosen. All these steels have a tensile strength in the hot-rolled condition in the range of 60 to 70 kpsi.

The designer can choose factors of safety or permissible working stresses with more confidence if he or she is aware of the values of those used by others. One of the best standards to use is the American Institute of Steel Construction (AISC) code for building construction.⁵ The permissible stresses are now based on the yield strength of the material instead of the ultimate strength, and the code permits the use of a variety of ASTM structural steels having yield strengths varying from 33 to 50 kpsi. Provided the loading is the same, the code permits the same stress in the weld metal as in the parent metal. For these ASTM steels, $S_y = 0.5S_u$. Table 9-4 lists the formulas specified by the code for calculating these permissible stresses for various loading conditions. The factors of safety implied by this code are easily calculated. For tension, $n = 1/0.60 = 1.67$. For shear, $n = 0.577/0.40 = 1.44$, using the distortion-energy theory as the criterion of failure.

It is important to observe that the electrode material is often the strongest material present. If a bar of AISI 1010 steel is welded to one of 1018 steel, the weld metal is actually a mixture of the electrode material and the 1010 and 1018 steels. Furthermore,

⁵For a copy, either write the AISC, 400 N. Michigan Ave., Chicago, IL 60611, or contact on the Internet at www.aisc.org.

Table 9–3

Minimum Weld-Metal
Properties

AWS Electrode Number*	Tensile Strength kpsi (MPa)	Yield Strength, kpsi (MPa)	Percent Elongation
E60xx	62 (427)	50 (345)	17–25
E70xx	70 (482)	57 (393)	22
E80xx	80 (551)	67 (462)	19
E90xx	90 (620)	77 (531)	14–17
E100xx	100 (689)	87 (600)	13–16
E120xx	120 (827)	107 (737)	14

*The American Welding Society (AWS) specification code numbering system for electrodes. This system uses an E prefixed to a four- or five-digit numbering system in which the first two or three digits designate the approximate tensile strength. The last digit includes variables in the welding technique, such as current supply. The next-to-last digit indicates the welding position, as, for example, flat, or vertical, or overhead. The complete set of specifications may be obtained from the AWS upon request.

Table 9–4

Stresses Permitted by the
AISC Code for Weld
Metal

Type of Loading	Type of Weld	Permissible Stress	n^*
Tension	Butt	$0.60S_y$	1.67
Bearing	Butt	$0.90S_y$	1.11
Bending	Butt	$0.60\text{--}0.66S_y$	1.52–1.67
Simple compression	Butt	$0.60S_y$	1.67
Shear	Butt or fillet	$0.30S_{ut}^\dagger$	

*The factor of safety n has been computed by using the distortion-energy theory.

†Shear stress on base metal should not exceed $0.40S_y$ of base metal.

a welded cold-drawn bar has its cold-drawn properties replaced with the hot-rolled properties in the vicinity of the weld. Finally, remembering that the weld metal is usually the strongest, do check the stresses in the parent metals.

The AISC code, as well as the AWS code, for bridges includes permissible stresses when fatigue loading is present. The designer will have no difficulty in using these codes, but their empirical nature tends to obscure the fact that they have been established by means of the same knowledge of fatigue failure already discussed in Chap. 6. Of course, for structures covered by these codes, the actual stresses *cannot* exceed the permissible stresses; otherwise the designer is legally liable. But in general, codes tend to conceal the actual margin of safety involved.

The fatigue stress-concentration factors listed in Table 9–5 are suggested for use. These factors should be used for the parent metal as well as for the weld metal. Table 9–6 gives steady-load information and minimum fillet sizes.

Table 9–5

Fatigue
Stress-Concentration
Factors, K_{fs}

Type of Weld	K_{fs}
Reinforced butt weld	1.2
Toe of transverse fillet weld	1.5
End of parallel fillet weld	2.7
Tbutt joint with sharp corners	2.0

Table 9–6

Allowable Steady Loads and Minimum Fillet Weld Sizes

Schedule A: Allowable Load for Various Sizes of Fillet Welds

		Strength Level of Weld Metal (EXX)						
		60*	70*	80	90*	100	110*	120
Allowable shear stress on throat, ksi (1000 psi) of fillet weld or partial penetration groove weld								
$\tau =$		18.0	21.0	24.0	27.0	30.0	33.0	36.0
Allowable Unit Force on Fillet Weld, kip/linear in								
$t_f =$		12.73h	14.85h	16.97h	19.09h	21.21h	23.33h	25.45h
Allowable Unit Force for Various Sizes of Fillet Welds kip/linear in								
Leg Size h, in		12.73	14.85	16.97	19.09	21.21	23.33	25.45
7/8		11.14	12.99	14.85	16.70	18.57	20.41	22.27
3/4		9.55	11.14	12.73	14.32	15.92	17.50	19.09
5/8		7.96	9.28	10.61	11.93	13.27	14.58	15.91
1/2		6.37	7.42	8.48	9.54	10.61	11.67	12.73
7/16		5.57	6.50	7.42	8.35	9.28	10.21	11.14
3/8		4.77	5.57	6.36	7.16	7.95	8.75	9.54
5/16		3.98	4.64	5.30	5.97	6.63	7.29	7.95
1/4		3.18	3.71	4.24	4.77	5.30	5.83	6.36
3/16		2.39	2.78	3.18	3.58	3.98	4.38	4.77
1/8		1.59	1.86	2.12	2.39	2.65	2.92	3.18
1/16		0.795	0.930	1.06	1.19	1.33	1.46	1.59

*Fillet welds actually tested by the joint AWS/AWS Task Committee.
 $t_f = 0.707h \tau_{all}$

Source: From Omer W. Blodgett (ed.), *Stress Allowables Affect Weldment Design*, D41.2, The James F. Lincoln Arc Welding Foundation, Cleveland, May 1991, p. 3. Reprinted by permission of Lincoln Electric Company.

Schedule B: Minimum Fillet Weld Size, h

Material Thickness of Thicker Part Joined, in	Weld Size, in
*To $\frac{1}{4}$ incl.	$\frac{1}{8}$
Over $\frac{1}{4}$	$\frac{3}{16}$
Over $\frac{1}{2}$	$\frac{1}{4}$
†Over $\frac{3}{4}$	$\frac{5}{16}$
Over $1\frac{1}{2}$	$\frac{3}{8}$
Over $2\frac{1}{4}$	$\frac{1}{2}$
Over 6	$\frac{5}{8}$

Not to exceed the thickness of the thinner part.

*Minimum size for bridge application does not go below $\frac{3}{16}$ in.

†For minimum fillet weld size, schedule does not go above $\frac{5}{16}$ in fillet weld for every $\frac{3}{4}$ in material.

9-6 Static Loading

Some examples of statically loaded joints are useful in comparing and contrasting the conventional method of analysis and the welding code methodology.

EXAMPLE 9-2

A $\frac{1}{2}$ -in by 2-in rectangular-cross-section 1015 bar carries a static load of 16.5 kip. It is welded to a gusset plate with a $\frac{3}{8}$ -in fillet weld 2 in long on both sides with an E70XX electrode as depicted in Fig. 9-18. Use the welding code method.

- (a) Is the weld metal strength satisfactory?
(b) Is the attachment strength satisfactory?

Solution

(a) From Table 9-6, allowable force per unit length for a $\frac{3}{8}$ -in E70 electrode metal is 5.57 kip/in of weldment; thus

$$F = 5.57l = 5.57(4) = 22.28 \text{ kip}$$

Since $22.28 > 16.5$ kip, weld metal strength is satisfactory.

(b) Check shear in attachment adjacent to the welds. From Table 9-4 and Table A-20, from which $S_y = 27.5$ kpsi, the allowable attachment shear stress is

$$\tau_{\text{all}} = 0.4S_y = 0.4(27.5) = 11 \text{ kpsi}$$

The shear stress τ on the base metal adjacent to the weld is

$$\tau = \frac{F}{2hl} = \frac{16.5}{2(0.375)2} = 11 \text{ kpsi}$$

Since $\tau_{\text{all}} \geq \tau$, the attachment is satisfactory near the weld beads. The tensile stress in the shank of the attachment σ is

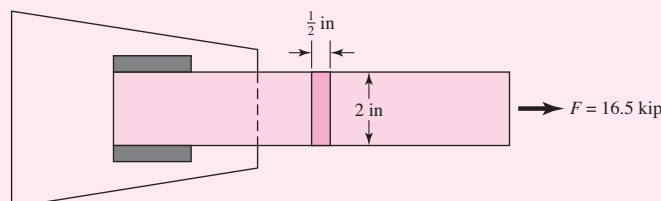
$$\sigma = \frac{F}{tl} = \frac{16.5}{(1/2)2} = 16.5 \text{ kpsi}$$

The allowable tensile stress σ_{all} , from Table 9-4, is $0.6S_y$ and, with welding code safety level preserved,

$$\sigma_{\text{all}} = 0.6S_y = 0.6(27.5) = 16.5 \text{ kpsi}$$

Since $\sigma_{\text{all}} \geq \sigma$, the shank tensile stress is satisfactory.

| Figure 9-18



EXAMPLE 9-3

A specially rolled A36 structural steel section for the attachment has a cross section as shown in Fig. 9-19 and has yield and ultimate tensile strengths of 36 and 58 kpsi, respectively. It is statically loaded through the attachment centroid by a load of $F = 24$ kip. Unsymmetrical weld tracks can compensate for eccentricity such that there is no moment to be resisted by the welds. Specify the weld track lengths l_1 and l_2 for a $\frac{5}{16}$ -in fillet weld using an E70XX electrode. This is part of a design problem in which the design variables include weld lengths and the fillet leg size.

Solution The y coordinate of the section centroid of the attachment is

$$\bar{y} = \frac{\sum y_i A_i}{\sum A_i} = \frac{1(0.75)2 + 3(0.375)2}{0.75(2) + 0.375(2)} = 1.67 \text{ in}$$

Summing moments about point B to zero gives

$$\sum M_B = 0 = -F_1 b + F \bar{y} = -F_1(4) + 24(1.67)$$

from which

$$F_1 = 10 \text{ kip}$$

It follows that

$$F_2 = 24 - 10.0 = 14.0 \text{ kip}$$

The weld throat areas have to be in the ratio $14/10 = 1.4$, that is, $l_2 = 1.4l_1$. The weld length design variables are coupled by this relation, so l_1 is the weld length design variable. The other design variable is the fillet weld leg size h , which has been decided by the problem statement. From Table 9-4, the allowable shear stress on the throat τ_{all} is

$$\tau_{\text{all}} = 0.3(70) = 21 \text{ kpsi}$$

The shear stress τ on the 45° throat is

$$\begin{aligned} \tau &= \frac{F}{(0.707)h(l_1 + l_2)} = \frac{F}{(0.707)h(l_1 + 1.4l_1)} \\ &= \frac{F}{(0.707)h(2.4l_1)} = \tau_{\text{all}} = 21 \text{ kpsi} \end{aligned}$$

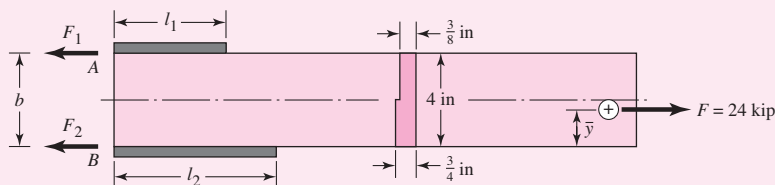
from which the weld length l_1 is

$$l_1 = \frac{24}{21(0.707)0.3125(2.4)} = 2.16 \text{ in}$$

and

$$l_2 = 1.4l_1 = 1.4(2.16) = 3.02 \text{ in}$$

Figure 9-19



These are the weld-bead lengths required by weld metal strength. The attachment shear stress allowable in the base metal, from Table 9–4, is

$$\tau_{\text{all}} = 0.4S_y = 0.4(36) = 14.4 \text{ kpsi}$$

The shear stress τ in the base metal adjacent to the weld is

$$\tau = \frac{F}{h(l_1 + l_2)} = \frac{F}{h(l_1 + 1.4l_1)} = \frac{F}{h(2.4l_1)} = \tau_{\text{all}} = 14.4 \text{ kpsi}$$

from which

$$l_1 = \frac{F}{14.4h(2.4)} = \frac{24}{14.4(0.3125)2.4} = 2.22 \text{ in}$$

$$l_2 = 1.4l_1 = 1.4(2.22) = 3.11 \text{ in}$$

These are the weld-bead lengths required by base metal (attachment) strength. The base metal controls the weld lengths. For the allowable tensile stress σ_{all} in the shank of the attachment, the AISC allowable for tension members is $0.6S_y$; therefore,

$$\sigma_{\text{all}} = 0.6S_y = 0.6(36) = 21.6 \text{ kpsi}$$

The nominal tensile stress σ is *uniform* across the attachment cross section because of the load application at the centroid. The stress σ is

$$\sigma = \frac{F}{A} = \frac{24}{0.75(2) + 2(0.375)} = 10.7 \text{ kpsi}$$

Since $\sigma_{\text{all}} \geq \sigma$, the shank section is satisfactory. With l_1 set to a nominal $2\frac{1}{4}$ in, l_2 should be $1.4(2.25) = 3.15$ in.

Decision Set $l_1 = 2\frac{1}{4}$ in, $l_2 = 3\frac{1}{4}$ in. The small magnitude of the departure from $l_2/l_1 = 1.4$ is not serious. The joint is essentially moment-free.

EXAMPLE 9–4

Perform an adequacy assessment of the statically loaded welded cantilever carrying 500 lbf depicted in Fig. 9–20. The cantilever is made of AISI 1018 HR steel and welded with a $\frac{3}{8}$ -in fillet weld as shown in the figure. An E6010 electrode was used, and the design factor was 3.0.

- Use the conventional method for the weld metal.
- Use the conventional method for the attachment (cantilever) metal.
- Use a welding code for the weld metal.

Solution

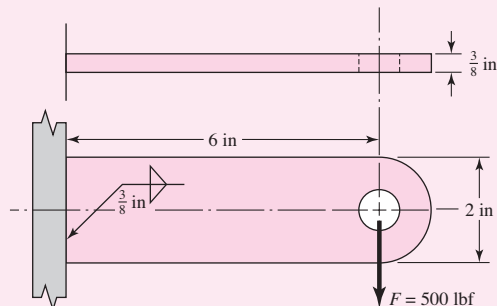
(a) From Table 9–3, $S_y = 50$ kpsi, $S_{ut} = 62$ kpsi. From Table 9–2, second pattern, $b = 0.375$ in, $d = 2$ in, so

$$A = 1.414hd = 1.414(0.375)2 = 1.06 \text{ in}^2$$

$$I_u = d^3/6 = 2^3/6 = 1.33 \text{ in}^3$$

$$I = 0.707hI_u = 0.707(0.375)1.33 = 0.353 \text{ in}^4$$

| Figure 9–20



Primary shear:

$$\tau' = \frac{F}{A} = \frac{500(10^{-3})}{1.06} = 0.472 \text{ kpsi}$$

Secondary shear:

$$\tau'' = \frac{Mr}{I} = \frac{500(10^{-3})(6)(1)}{0.353} = 8.50 \text{ kpsi}$$

The shear magnitude τ is the Pythagorean combination

$$\tau = (\tau'^2 + \tau''^2)^{1/2} = (0.472^2 + 8.50^2)^{1/2} = 8.51 \text{ kpsi}$$

The factor of safety based on a minimum strength and the distortion-energy criterion is

$$\text{Answer } n = \frac{S_{sy}}{\tau} = \frac{0.577(50)}{8.51} = 3.39$$

Since $n \geq n_d$, that is, $3.39 \geq 3.0$, the weld metal has satisfactory strength.

(b) From Table A–20, minimum strengths are $S_{ut} = 58 \text{ kpsi}$ and $S_y = 32 \text{ kpsi}$. Then

$$\sigma = \frac{M}{I/c} = \frac{M}{bd^2/6} = \frac{500(10^{-3})6}{0.375(2^2)/6} = 12 \text{ kpsi}$$

$$\text{Answer } n = \frac{S_y}{\sigma} = \frac{32}{12} = 2.67$$

Since $n < n_d$, that is, $2.67 < 3.0$, the joint is unsatisfactory as to the attachment strength.

(c) From part (a), $\tau = 8.51 \text{ kpsi}$. For an E6010 electrode Table 9–6 gives the allowable shear stress τ_{all} as 18 kpsi. Since $\tau < \tau_{all}$, the weld is satisfactory. Since the code already has a design factor of $0.577(50)/18 = 1.6$ included at the equality, the corresponding factor of safety to part (a) is

$$\text{Answer } n = 1.6 \frac{18}{8.51} = 3.38$$

which is consistent.

9-7 Fatigue Loading

The conventional methods will be provided here. In fatigue, the Gerber criterion is best; however, you will find that the Goodman criterion is in common use. Recall, that the fatigue stress concentration factors are given in Table 9-5. For welding codes, see the fatigue stress allowables in the AISC manual.

Some examples of fatigue loading of welded joints follow.

EXAMPLE 9-5

The 1018 steel strap of Fig. 9-21 has a 1000-lbf, completely reversed load applied. Determine the factor of safety of the weldment for infinite life.

Solution

From Table A-20 for the 1018 attachment metal the strengths are $S_{ut} = 58$ kpsi and $S_y = 32$ kpsi. For the E6010 electrode, $S_{ut} = 62$ kpsi and $S_y = 50$ kpsi. The fatigue stress-concentration factor, from Table 9-5, is $K_{fs} = 2.7$. From Table 6-2, p. 280, $k_a = 39.9(58)^{-0.995} = 0.702$. The shear area is:

$$A = 2(0.707)0.375(2) = 1.061 \text{ in}^2$$

For a uniform shear stress on the throat, $k_b = 1$.

From Eq. (6-26), p. 282, for torsion (shear),

$$k_c = 0.59 \quad k_d = k_e = k_f = 1$$

From Eqs. (6-8), p. 274, and (6-18), p. 279,

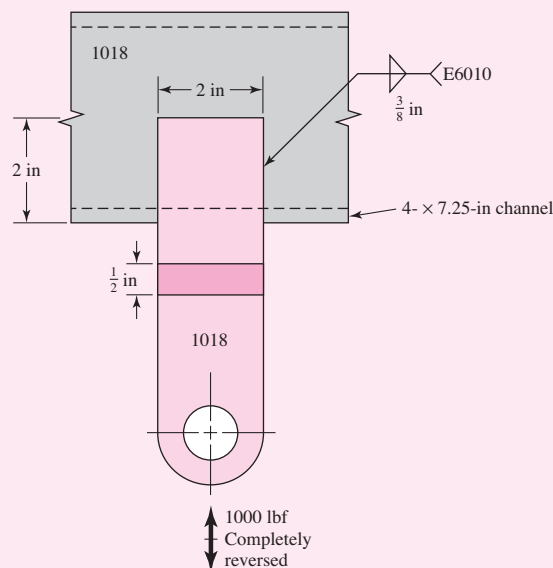
$$S_{se} = 0.702(1)0.59(1)(1)(1)0.5(58) = 12.0 \text{ kpsi}$$

$$K_{fs} = 2.7 \quad F_a = 1000 \text{ lbf} \quad F_m = 0$$

Only primary shear is present:

$$\tau'_a = \frac{K_{fs}F_a}{A} = \frac{2.7(1000)}{1.061} = 2545 \text{ psi} \quad \tau'_m = 0 \text{ psi}$$

Figure 9-21



In the absence of a midrange component, the fatigue factor of safety n_f is given by

Answer

$$n_f = \frac{S_{se}}{\tau'_a} = \frac{12\,000}{2545} = 4.72$$

EXAMPLE 9-6

The 1018 steel strap of Fig. 9-22 has a repeatedly applied load of 2000 lbf ($F_a = F_m = 1000$ lbf). Determine the fatigue factor of safety fatigue strength of the weldment.

Solution

From Table 6-2, p. 280, $k_a = 39.9(58)^{-0.995} = 0.702$.

$$A = 2(0.707)0.375(2) = 1.061 \text{ in}^2$$

For uniform shear stress on the throat $k_b = 1$.

From Eq. (6-26), p. 282, $k_c = 0.59$. From Eqs. (6-8), p. 274, and (6-18), p. 279,

$$S_{se} = 0.702(1)0.59(1)(1)0.5(58) = 12.0 \text{ kpsi}$$

From Table 9-5, $K_{fs} = 2$. Only primary shear is present:

$$\tau'_a = \tau'_m = \frac{K_{fs}F_a}{A} = \frac{2(1000)}{1.061} = 1885 \text{ psi}$$

From Eq. (6-54), p. 309, $S_{su} \doteq 0.67S_{ut}$. This, together with the Gerber fatigue failure criterion for shear stresses from Table 6-7, p. 299, gives

$$n_f = \frac{1}{2} \left(\frac{0.67S_{ut}}{\tau_m} \right)^2 \frac{\tau_a}{S_{se}} \left[-1 + \sqrt{1 + \left(\frac{2\tau_m S_{se}}{0.67S_{ut} \tau_a} \right)^2} \right]$$

Answer

$$n_f = \frac{1}{2} \left[\frac{0.67(58)}{1.885} \right]^2 \frac{1.885}{12.0} \left\{ -1 + \sqrt{1 + \left[\frac{2(1.885)12.0}{0.67(58)1.885} \right]^2} \right\} = 5.85$$

Figure 9-22

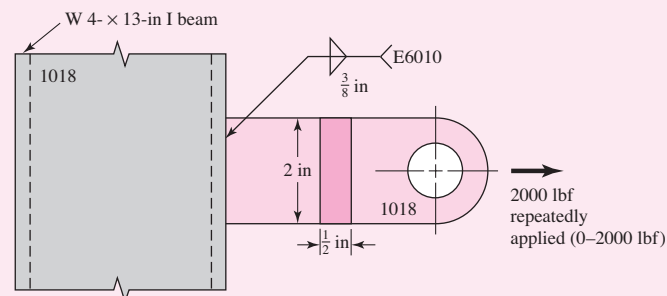
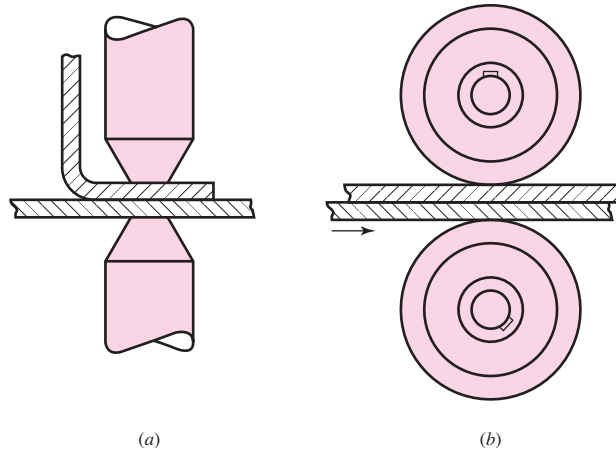


Figure 9–23

(a) Spot welding; (b) seam welding.

**9–8 Resistance Welding**

The heating and consequent welding that occur when an electric current is passed through several parts that are pressed together is called *resistance welding*. *Spot welding* and *seam welding* are forms of resistance welding most often used. The advantages of resistance welding over other forms are the speed, the accurate regulation of time and heat, the uniformity of the weld, and the mechanical properties that result. In addition the process is easy to automate, and filler metal and fluxes are not needed.

The spot- and seam-welding processes are illustrated schematically in Fig. 9–23. Seam welding is actually a series of overlapping spot welds, since the current is applied in pulses as the work moves between the rotating electrodes.

Failure of a resistance weld occurs either by shearing of the weld or by tearing of the metal around the weld. Because of the possibility of tearing, it is good practice to avoid loading a resistance-welded joint in tension. Thus, for the most part, design so that the spot or seam is loaded in pure shear. The shear stress is then simply the load divided by the area of the spot. Because the thinner sheet of the pair being welded may tear, the strength of spot welds is often specified by stating the load per spot based on the thickness of the thinnest sheet. Such strengths are best obtained by experiment.

Somewhat larger factors of safety should be used when parts are fastened by spot welding rather than by bolts or rivets, to account for the metallurgical changes in the materials due to the welding.

9–9 Adhesive Bonding⁶

The use of polymeric adhesives to join components for structural, semistructural, and non-structural applications has expanded greatly in recent years as a result of the unique advantages adhesives may offer for certain assembly processes and the development of new adhesives with improved robustness and environmental acceptability. The increasing complexity of modern assembled structures and the diverse types of materials used have led to many joining applications that would not be possible with more conventional joining

⁶For a more extensive discussion of this topic, see J. E. Shigley and C. R. Mischke, *Mechanical Engineering Design*, 6th ed., McGraw-Hill, New York, 2001, Sec. 9–11. This section was prepared with the assistance of Professor David A. Dillard, Professor of Engineering Science and Mechanics and Director of the Center for Adhesive and Sealant Science, Virginia Polytechnic Institute and State University, Blacksburg, Virginia, and with the encouragement and technical support of the Bonding Systems Division of 3M, Saint Paul, Minnesota.

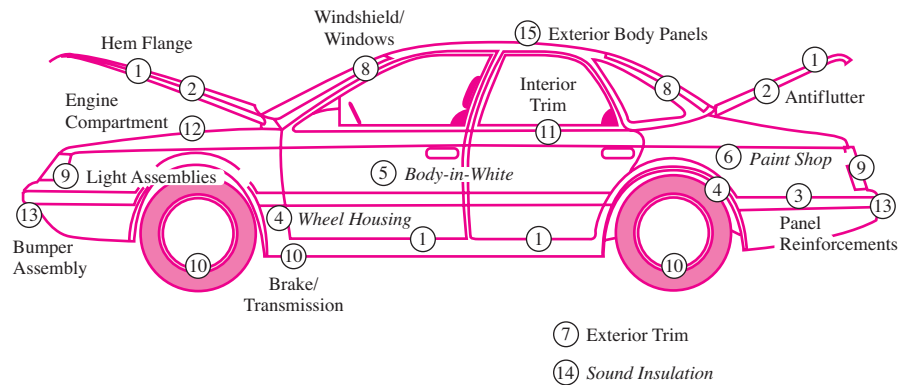
**Figure 9–24**

Diagram of an automobile body showing at least 15 locations at which adhesives and sealants could be used or are being used. Particular note should be made of the windshield (8), which is considered a load-bearing structure in modern automobiles and is adhesively bonded. Also attention should be paid to hem flange bonding (1), in which adhesives are used to bond and seal. Adhesives are used to bond friction surfaces in brakes and clutches (10). Antiflutter adhesive bonding (2) helps control deformation of hood and trunk lids under wind shear. Thread-sealing adhesives are used in engine applications (12). (From A. V. Pocius, *Adhesion and Adhesives Technology*, 2nd edition, Hanser Publishers, Munich, 2002. Reprinted by permission.)

techniques. Adhesives are also being used either in conjunction with or to replace mechanical fasteners and welds. Reduced weight, sealing capabilities, and reduced part count and assembly time, as well as improved fatigue and corrosion resistance, all combine to provide the designer with opportunities for customized assembly. In 1998, for example, adhesives were a \$20 billion industry with 24 trillion pounds of adhesives produced and sold. Figure 9–24 illustrates the numerous places where adhesives are used on a modern automobile. Indeed, the fabrication of many modern vehicles, devices, and structures is dependent on adhesives.

In well-designed joints and with proper processing procedures, use of adhesives can result in significant reductions in weight. Eliminating mechanical fasteners eliminates the weight of the fasteners, and also may permit the use of thinner-gauge materials because stress concentrations associated with the holes are eliminated. The capability of polymeric adhesives to dissipate energy can significantly reduce noise, vibration, and harshness (NVH), crucial in modern automobile performance. Adhesives can be used to assemble heat-sensitive materials or components that might be damaged by drilling holes for mechanical fasteners. They can be used to join dissimilar materials or thin-gauge stock that cannot be joined through other means.

Types of Adhesive

There are numerous adhesive types for various applications. They may be classified in a variety of ways depending on their chemistry (e.g., epoxies, polyurethanes, polyimides), their form (e.g., paste, liquid, film, pellets, tape), their type (e.g., hot melt, reactive hot melt, thermosetting, pressure sensitive, contact), or their load-carrying capability (structural, semistructural, or nonstructural).

Structural adhesives are relatively strong adhesives that are normally used well below their glass transition temperature; common examples include epoxies and certain acrylics. Such adhesives can carry significant stresses, and they lend themselves to structural applications. For many engineering applications, semistructural applications (where

failure would be less critical) and nonstructural applications (of headliners, etc., for aesthetic purposes) are also of significant interest to the design engineer, providing cost-effective means required for assembly of finished products. These include *contact adhesives*, where a solution or emulsion containing an elastomeric adhesive is coated onto both adherends, the solvent is allowed to evaporate, and then the two adherends are brought into contact. Examples include rubber cement and adhesives used to bond laminates to countertops. *Pressure-sensitive adhesives* are very low modulus elastomers that deform easily under small pressures, permitting them to wet surfaces. When the substrate and adhesive are brought into intimate contact, van der Waals forces are sufficient to maintain the contact and provide relatively durable bonds. Pressure-sensitive adhesives are normally purchased as tapes or labels for nonstructural applications, although there are also double-sided foam tapes that can be used in semistructural applications. As the name implies, *hot melts* become liquid when heated, wetting the surfaces and then cooling into a solid polymer. These materials are increasingly applied in a wide array of engineering applications by more sophisticated versions of the glue guns in popular use. *Anaerobic adhesives* cure within narrow spaces deprived of oxygen; such materials have been widely used in mechanical engineering applications to lock bolts or bearings in place. Cure in other adhesives may be induced by exposure to ultraviolet light or electron beams, or it may be catalyzed by certain materials that are ubiquitous on many surfaces, such as water.

Table 9–7 presents important strength properties of commonly used adhesives.

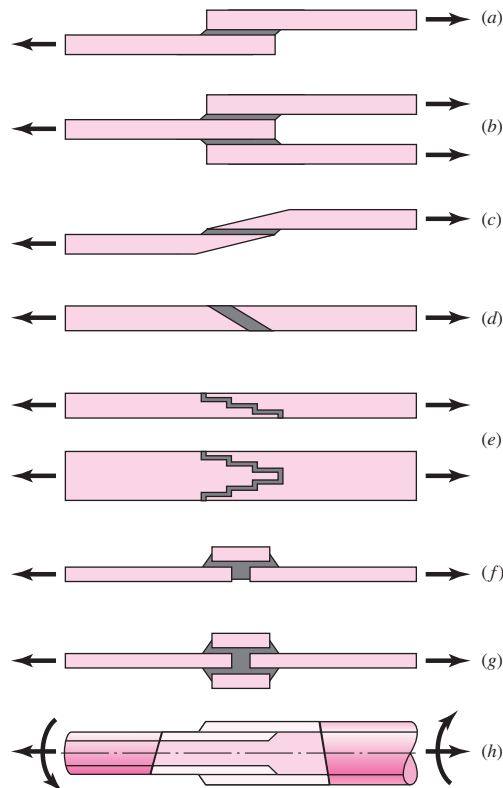
Table 9–7

Mechanical Performance of Various Types of Adhesives *Source: From A. V. Pocius, Adhesion and Adhesives Technology, Hanser Publishers, Munich, 2002. Reprinted by permission.*

Adhesive Chemistry or Type	Room Temperature Lap-Shear Strength, MPa (psi)		Peel Strength Per Unit Width, kN/m (lbf/in)	
Pressure-sensitive	0.01–0.07	(2–10)	0.18–0.88	(1–5)
Starch-based	0.07–0.7	(10–100)	0.18–0.88	(1–5)
Cellosics	0.35–3.5	(50–500)	0.18–1.8	(1–10)
Rubber-based	0.35–3.5	(50–500)	1.8–7	(10–40)
Formulated hot melt	0.35–4.8	(50–700)	0.88–3.5	(5–20)
Synthetically designed hot melt	0.7–6.9	(100–1000)	0.88–3.5	(5–20)
PVAc emulsion (white glue)	1.4–6.9	(200–1000)	0.88–1.8	(5–10)
Cyanoacrylate	6.9–13.8	(1000–2000)	0.18–3.5	(1–20)
Protein-based	6.9–13.8	(1000–2000)	0.18–1.8	(1–10)
Anaerobic acrylic	6.9–13.8	(1000–2000)	0.18–1.8	(1–10)
Urethane	6.9–17.2	(1000–2500)	1.8–8.8	(10–50)
Rubber-modified acrylic	13.8–24.1	(2000–3500)	1.8–8.8	(10–50)
Modified phenolic	13.8–27.6	(2000–4000)	3.6–7	(20–40)
Unmodified epoxy	10.3–27.6	(1500–4000)	0.35–1.8	(2–10)
Bis-maleimide	13.8–27.6	(2000–4000)	0.18–3.5	(1–20)
Polyimide	13.8–27.6	(2000–4000)	0.18–0.88	(1–5)
Rubber-modified epoxy	20.7–41.4	(3000–6000)	4.4–14	(25–80)

Figure 9–25

Common types of lap joints used in mechanical design: (a) single lap; (b) double lap; (c) scarf; (d) bevel; (e) step; (f) butt strap; (g) double butt strap; (h) tubular lap. (Adapted from R. D. Adams, J. Comyn, and W. C. Wake, *Structural Adhesive Joints in Engineering*, 2nd ed., Chapman and Hall, New York, 1997.)

**Stress Distributions**

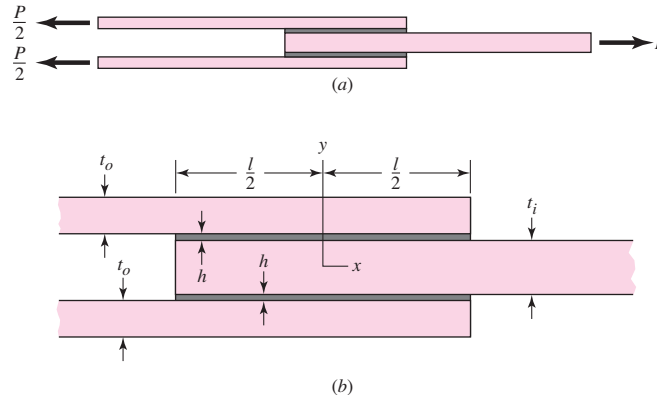
Good design practice normally requires that adhesive joints be constructed in such a manner that the adhesive carries the load in shear rather than tension. Bonds are typically much stronger when loaded in shear rather than in tension across the bond plate. Lap-shear joints represent an important family of joints, both for test specimens to evaluate adhesive properties and for actual incorporation into practical designs. Generic types of lap joints that commonly arise are illustrated in Fig. 9–25.

The simplest analysis of lap joints suggests the applied load is uniformly distributed over the bond area. Lap joint test results, such as those obtained following the ASTM D1002 for single-lap joints, report the “apparent shear strength” as the breaking load divided by the bond area. Although this simple analysis can be adequate for stiff adherends bonded with a soft adhesive over a relatively short bond length, significant peaks in shear stress occur except for the most flexible adhesives. In an effort to point out the problems associated with such practice, ASTM D4896 outlines some of the concerns associated with taking this simplistic view of stresses within lap joints.

In 1938, O. Volkersen presented an analysis of the lap joint, known as the *shear-lag model*. It provides valuable insights into the shear-stress distributions in a host of lap joints. Bending induced in the single-lap joint due to eccentricity significantly complicates the analysis, so here we will consider a symmetric double-lap joint to

Figure 9–26

Double-lap joint.



illustrate the principles. The shear-stress distribution for the double lap joint of Fig. 9–26 is given by

$$\tau(x) = \frac{P\omega}{4b \sinh(\omega l/2)} \cosh(\omega x) + \left[\frac{P\omega}{4b \cosh(\omega l/2)} \left(\frac{2E_o t_o - E_i t_i}{2E_o t_o + E_i t_i} \right) + \frac{(\alpha_i - \alpha_o) \Delta T \omega}{(1/E_o t_o + 2/E_i t_i) \cosh(\omega l/2)} \right] \sinh(\omega x) \quad (9-7)$$

where

$$\omega = \sqrt{\frac{G}{h} \left(\frac{1}{E_o t_o} + \frac{2}{E_i t_i} \right)}$$

and E_o , t_o , α_o , and E_i , t_i , α_i , are the modulus, thickness, coefficient of thermal expansion for the outer and inner adherend, respectively; G , h , b , and l are the shear modulus, thickness, width, and length of the adhesive, respectively; and ΔT is a change in temperature of the joint. If the adhesive is cured at an elevated temperature such that the stress-free temperature of the joint differs from the service temperature, the mismatch in thermal expansion of the outer and inner adherends induces a thermal shear across the adhesive.

EXAMPLE 9–7

The double-lap joint depicted in Fig. 9–26 consists of aluminum outer adherends and an inner steel adherend. The assembly is cured at 250°F and is stress-free at 200°F. The completed bond is subjected to an axial load of 2000 lbf at a service temperature of 70°F. The width b is 1 in, the length of the bond l is 1 in. Additional information is tabulated below:

	G , psi	E , psi	α , in/(in · °F)	Thickness, in
Adhesive	$0.2(10^6)$		$55(10^{-6})$	0.020
Outer adherend		$10(10^6)$	$13.3(10^{-6})$	0.150
Inner adherend		$30(10^6)$	$6.0(10^{-6})$	0.100

Sketch a plot of the shear stress as a function of the length of the bond due to (a) thermal stress, (b) load-induced stress, and (c) the sum of stresses in a and b; and (d) find where the largest shear stress is maximum.

Solution In Eq. (9–7) the parameter ω is given by

$$\begin{aligned}\omega &= \sqrt{\frac{G}{h} \left(\frac{1}{E_o t_o} + \frac{2}{E_i t_i} \right)} \\ &= \sqrt{\frac{0.2(10^6)}{0.020} \left[\frac{1}{10(10^6)0.15} + \frac{2}{30(10^6)0.10} \right]} = 3.65 \text{ in}^{-1}\end{aligned}$$

(a) For the thermal component, $\alpha_i - \alpha_o = 6(10^{-6}) - 13.3(10^{-6}) = -7.3(10^{-6})$ in/(in · °F), $\Delta T = 70 - 200 = -130^\circ\text{F}$,

$$\begin{aligned}\tau_{th}(x) &= \frac{(\alpha_i - \alpha_o)\Delta T \omega \sinh(\omega x)}{(1/E_o t_o + 2/E_i t_i) \cosh(\omega l/2)} \\ \tau_{th}(x) &= \frac{-7.3(10^{-6})(-130)3.65 \sinh(3.65x)}{\left[\frac{1}{10(10^6)0.150} + \frac{2}{30(10^6)0.100} \right] \cosh\left[\frac{3.65(1)}{2} \right]} \\ &= 816.4 \sinh(3.65x)\end{aligned}$$

The thermal stress is plotted in Fig. (9–27) and tabulated at $x = -0.5, 0$, and 0.5 in the table below.

(b) The bond is “balanced” ($E_o t_o = E_i t_i/2$), so the load-induced stress is given by

$$\tau_P(x) = \frac{P \omega \cosh(\omega x)}{4b \sinh(\omega l/2)} = \frac{2000(3.65) \cosh(3.65x)}{4(1)3.0208} = 604.1 \cosh(3.65x) \quad (1)$$

The load-induced stress is plotted in Fig. (9–27) and tabulated at $x = -0.5, 0$, and 0.5 in the table below.

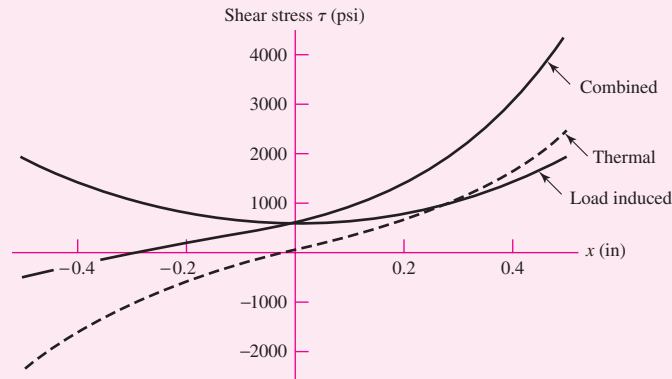
(c) Total stress table (in psi):

	$\tau(-0.5)$	$\tau(0)$	$\tau(0.5)$
Thermal only	-2466	0	2466
Load-induced only	1922	604	1922
Combined	-544	604	4388

(d) The maximum shear stress predicted by the shear-lag model will always occur at the ends. See the plot in Fig. 9–27. Since the residual stresses are always present, significant shear stresses may already exist prior to application of the load. The large stresses present for the combined-load case could result in local yielding of a ductile adhesive or failure of a more brittle one. The significance of the thermal stresses serves as a caution against joining dissimilar adherends when large temperature changes are involved. Note also that the average shear stress due to the load is

Figure 9–27

Plot for Ex. 9–7.



$\tau_{\text{avg}} = P/(2bl) = 1000$ psi. Equation (1) produced a maximum of 1922 psi, almost double the average.

Although design considerations for single-lap joints are beyond the scope of this chapter, one should note that the load eccentricity is an important aspect in the stress state of single-lap joints. Adherend bending can result in shear stresses that may be as much as double those given for the double-lap configuration (for a given total bond area). In addition, peel stresses can be quite large and often account for joint failure. Finally, plastic bending of the adherends can lead to high strains, which less ductile adhesives cannot withstand, leading to bond failure as well. Bending stresses in the adherends at the end of the overlap can be four times greater than the average stress within the adherend; thus, they must be considered in the design. Figure 9–28 shows the shear and peel stresses present in a typical single-lap joint that corresponds to the ASTM D1002 test specimen. Note that the shear stresses are significantly larger than predicted by the Volkersen analysis, a result of the increased adhesive strains associated with adherend bending.

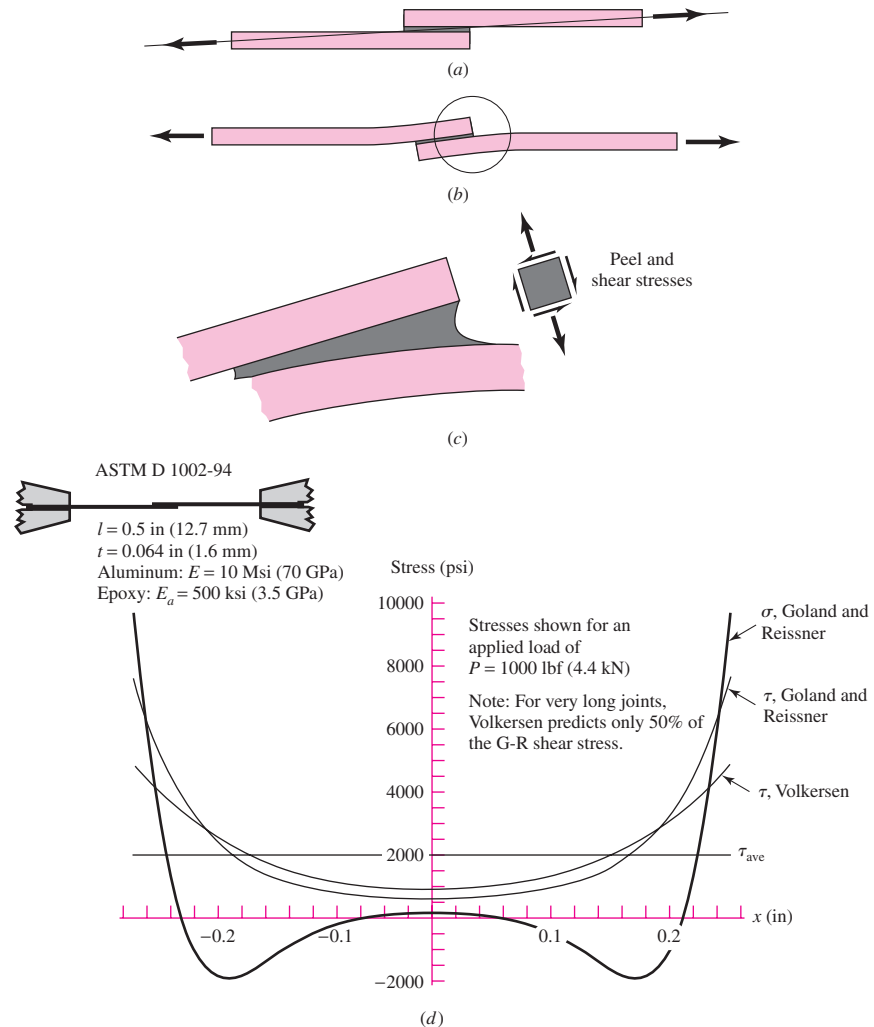
Joint Design

Some basic guidelines that should be used in adhesive joint design include:

- Design to place bondline in shear, not peel. Beware of peel stresses focused at bond terminations. When necessary, reduce peel stresses through tapering the adherend ends, increasing bond area where peel stresses occur, or utilizing rivets at bond terminations where peel stresses can initiate failures.
- Where possible, use adhesives with adequate ductility. The ability of an adhesive to yield reduces the stress concentrations associated with the ends of joints and increases the toughness to resist debond propagation.
- Recognize environmental limitations of adhesives and surface preparation methods. Exposure to water, solvents, and other diluents can significantly degrade adhesive performance in some situations, through displacing the adhesive from the surface or degrading the polymer. Certain adhesives may be susceptible to environmental stress cracking in the presence of certain solvents. Exposure to ultraviolet light can also degrade adhesives.

Figure 9–28

Stresses within a single-lap joint. (a) Lap-joint tensile forces have a line of action that is not initially parallel to the adherend sides. (b) As the load increases the adherends and bond bend. (c) In the locality of the end of an adherend peel and shear stresses appear, and the peel stresses often induce joint failure. (d) The seminal Goland and Reissner stress predictions (*J. Appl. Mech.*, vol. 77, 1944) are shown. (Note that the predicted shear stress maximum is higher than that predicted by the Volkersen shear-lag model because of adherend bending.)



- Design in a way that permits or facilitates inspections of bonds where possible. A missing rivet or bolt is often easy to detect, but debonds or unsatisfactory adhesive bonds are not readily apparent.
- Allow for sufficient bond area so that the joint can tolerate some debonding before going critical. This increases the likelihood that debonds can be detected. Having some regions of the overall bond at relatively low stress levels can significantly improve durability and reliability.
- Where possible, bond to multiple surfaces to offer support to loads in any direction. Bonding an attachment to a single surface can place peel stresses on the bond, whereas bonding to several adjacent planes tends to permit arbitrary loads to be carried predominantly in shear.
- Adhesives can be used in conjunction with spot welding. The process is known as *weld bonding*. The spot welds serve to fixture the bond until it is cured.

Figure 9–29 presents examples of improvements in adhesive bonding.

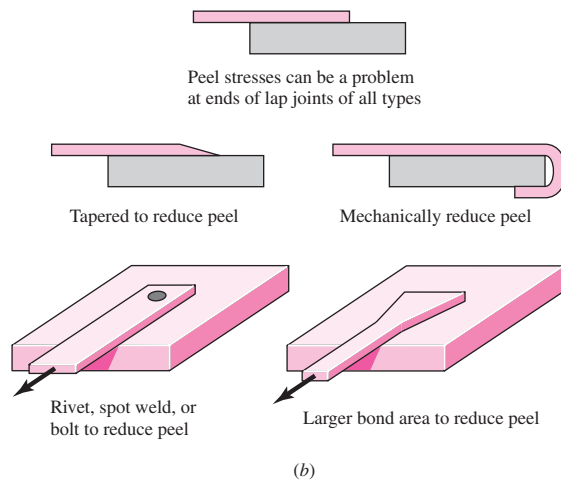
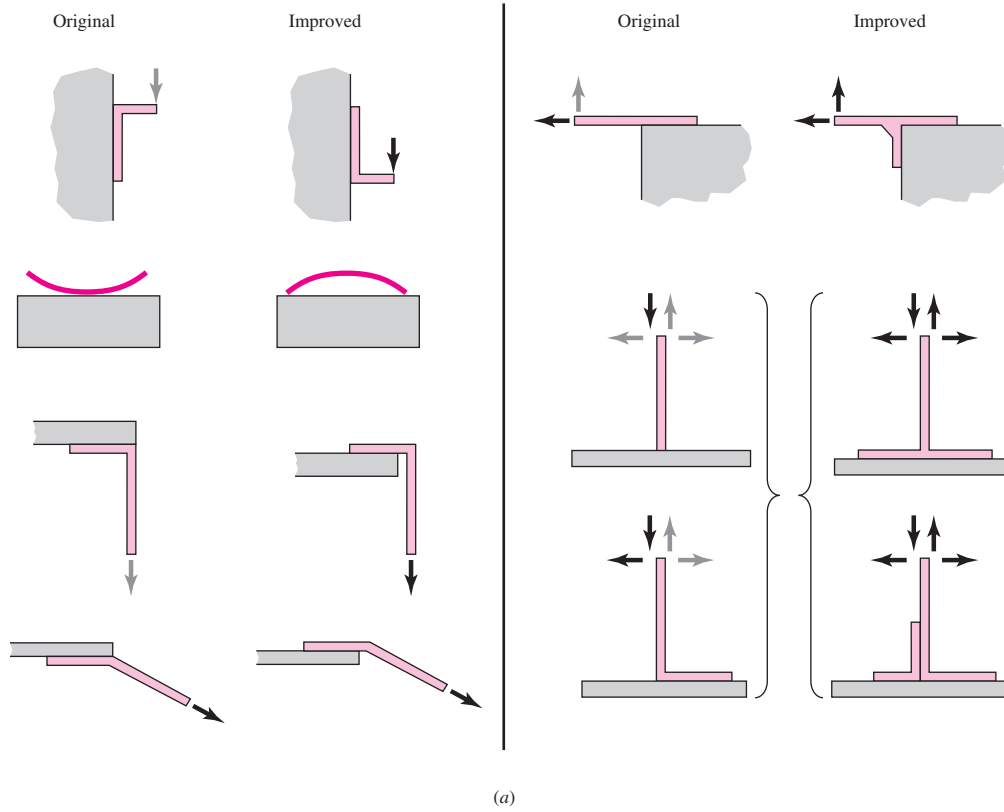


Figure 9-29

Design practices that improve adhesive bonding. (a) Gray load vectors are to be avoided as resulting strength is poor. (b) Means to reduce peel stresses in lap-type joints.

References

A number of good references are available for analyzing and designing adhesive bonds, including the following:

G. P. Anderson, S. J. Bennett, and K. L. DeVries, *Analysis and Testing of Adhesive Bonds*, Academic Press, New York, 1977.

R. D. Adams, J. Comyn, and W. C. Wake, *Structural Adhesive Joints in Engineering*, 2nd ed., Chapman and Hall, New York, 1997.

H. F. Brinson (ed.), *Engineered Materials Handbook, vol. 3: Adhesives and Sealants*, ASM International, Metals Park, Ohio, 1990.

A. J. Kinloch, *Adhesion and Adhesives: Science and Technology*, Chapman and Hall, New York, 1987.

A. J. Kinloch (ed.), *Durability of Structural Adhesives*, Applied Science Publishers, New York, 1983.

W. A. Lees, *Adhesives in Engineering Design*, Springer-Verlag, New York, 1984.

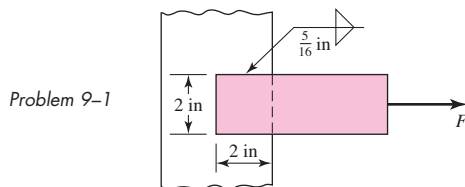
F. L. Matthews, *Joining Fibre-Reinforced Plastics*, Elsevier, New York, 1986.

A. V. Pocius, *Adhesion and Adhesives Technology: An Introduction*, Hanser, New York, 1997.

The Internet is also a good source of information. For example, try this website: www.3m.com/adhesives.

PROBLEMS

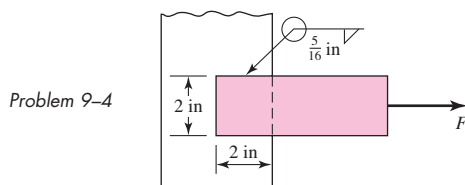
- 9-1** The figure shows a horizontal steel bar $\frac{3}{8}$ in thick loaded in steady tension and welded to a vertical support. Find the load F that will cause a shear stress of 20 kpsi in the throats of the welds.



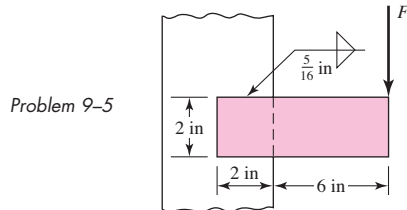
- 9-2** For the weldment of Prob. 9-1 the electrode specified is E7010. For the electrode metal, what is the allowable load on the weldment?

- 9-3** The members being joined in Prob. 9-1 are cold-rolled 1018 for the bar and hot-rolled 1018 for the vertical support. What load on the weldment is allowable because member metal is incorporated into the welds?

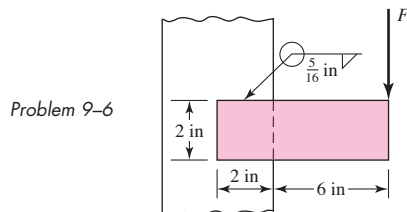
- 9-4** A $\frac{5}{16}$ -in steel bar is welded to a vertical support as shown in the figure. What is the shear stress in the throat of the welds if the force F is 32 kip?



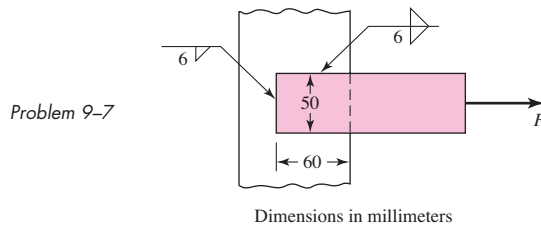
- 9-5** A $\frac{3}{4}$ -in-thick steel bar, to be used as a beam, is welded to a vertical support by two fillet welds as illustrated.
- (a) Find the safe bending force F if the permissible shear stress in the welds is 20 kpsi.
- (b) In part *a* you found a simple expression for F in terms of the allowable shear stress. Find the allowable load if the electrode is E7010, the bar is hot-rolled 1020, and the support is hot-rolled 1015.



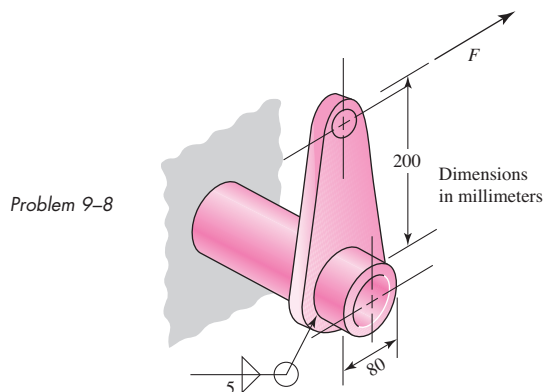
- 9-6** The figure shows a weldment just like that of Prob. 9-5 except that there are four welds instead of two. Show that the weldment is twice as strong as that of Prob. 9-5.



- 9-7** The weldment shown in the figure is subjected to an alternating force F . The hot-rolled steel bar is 10 mm thick and is of AISI 1010 steel. The vertical support is likewise of 1010 steel. The electrode is 6010. Estimate the fatigue load F the bar will carry if three 6-mm fillet welds are used.



- 9-8** The permissible shear stress for the weldment illustrated is 140 MPa. Estimate the load, F , that will cause this stress in the weldment throat.



- 9-9** In the design of weldments in torsion it is helpful to have a hierarchical perception of the relative efficiency of common patterns. For example, the weld-bead patterns shown in Table 9-1 can be ranked for desirability. Assume the space available is an $a \times a$ square. Use a formal figure of merit that is directly proportional to J and inversely proportional to the volume of weld metal laid down:

$$\text{fom} = \frac{J}{\text{vol}} = \frac{0.707hJ_u}{(h^2/2)l} = 1.414 \frac{J_u}{hl}$$

A tactical figure of merit could omit the constant, that is, $\text{fom}' = J_u/(hl)$. Rank the six patterns of Table 9-1 from most to least efficient.

- 9-10** The space available for a weld-bead pattern subject to bending is $a \times a$. Place the patterns of Table 9-2 in hierarchical order of efficiency of weld metal placement to resist bending. A formal figure of merit can be directly proportion to I and inversely proportional to the volume of weld metal laid down:

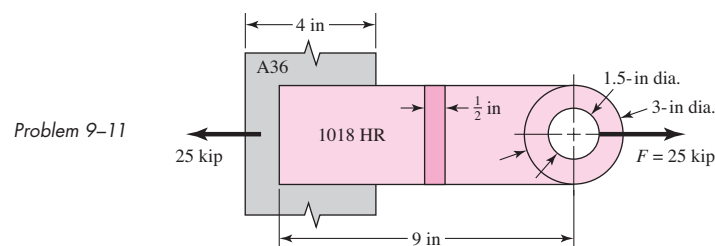
$$\text{fom} = \frac{I}{\text{vol}} = \frac{0.707hI_u}{(h^2/2)l} = 1.414 \frac{I_u}{hl}$$

The tactical figure of merit can omit the constant 1.414, that is, $\text{fom}' = I_u/(hl)$. Omit the patterns intended for T beams and I beams. Rank the remaining seven.

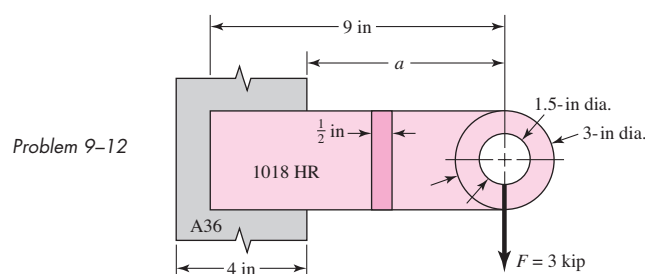
- 9-11** Among the possible forms of weldment problems are the following:

- The attachment and the member(s) exist and only the weld specifications need to be decided.
- The members exist, but both the attachment and the weldment must be designed.
- The attachment, member(s), and weldment must be designed.

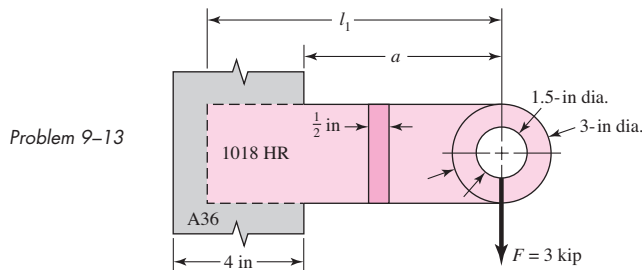
What follows is a design task of the first category. The attachment shown in the figure is made of 1018 HR steel $\frac{1}{2}$ in thick. The static force is 25 kip. The member is 4 in wide, such as that shown in Prob. 9-4. Specify the weldment (give the pattern, electrode number, type of weld, length of weld, and leg size).



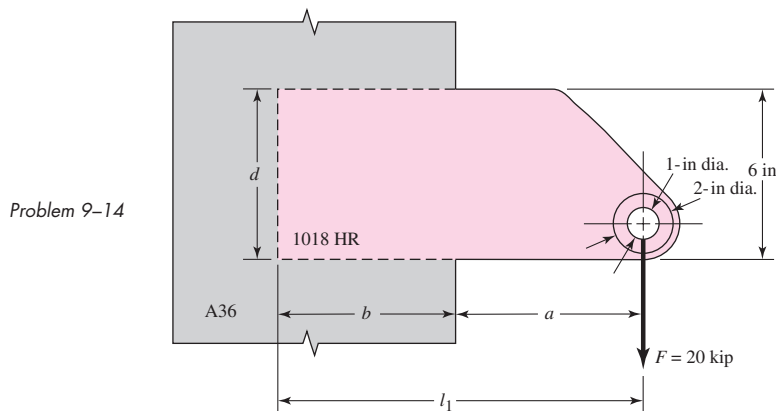
- 9-12** The attachment shown carries a bending load of 3 kip. The clearance a is to be 6 in. The load is a static 3000 lbf. Specify the weldment (give the pattern, electrode number, type of weld, length of weld, and leg size).



- 9-13** The attachment in Prob. 9-12 has not had its length determined. The static force is 3 kip; the clearance a is to be 6 in. The member is 4 in wide. Specify the weldment (give the pattern, electrode number, type of weld, length of bead, and leg size). Specify the attachment length.



- 9-14** A vertical column of A36 structural steel ($S_y = 36$ kpsi, $S_{ut} = 58-80$ kpsi) is 10 in wide. An attachment has been designed to the point shown in the figure. The static load of 20 kip is applied, and the clearance a of 6.25 in has to be equaled or exceeded. The attachment is 1018 hot-rolled steel, to be made from $\frac{1}{2}$ -in plate with weld-on bosses when all dimensions are known. Specify the weldment (give the pattern, electrode number, type of weld, length of weld bead, and leg size). Specify also the length l_1 for the attachment.



- 9-15** Write a computer program to assist with a task such as that of Prob. 9-14 with a rectangular weld-bead pattern for a torsional shear joint. In doing so solicit the force F , the clearance a , and the largest allowable shear stress. Then, as part of an iterative loop, solicit the dimensions b and d of the rectangle. These can be your design variables. Output all the parameters after the leg size has been determined by computation. In effect this will be your adequacy assessment when you stop iterating. Include the figure of merit $J_u/(hl)$ in the output. The fom and the leg size h with available width will give you a useful insight into the nature of this class of welds. Use your program to verify your solutions to Prob. 9-14.

- 9-16** Fillet welds in joints resisting bending are interesting in that they can be simpler than those resisting torsion. From Prob. 9-10 you learned that your objective is to place weld metal as far away from the weld-bead centroid as you can, but distributed in an orientation parallel to the x axis. Furthermore, placement on the top and bottom of the built-in end of a cantilever with rectangular cross section results in parallel weld beads, each element of which is in the ideal position. The object of this problem is to study the full weld bead and the interrupted weld-bead pattern. Consider the case of Fig. 9-17 with $F = 10\,000$ lbf, the beam length $a = 10$ in, $b = 8$ in, and

$d = 8$ in. For the second case, for the interrupted weld consider a centered gap of $b_1 = 2$ in existing in the top and bottom welds. Study the two cases with $\tau_{\text{all}} = 12.8$ kpsi. What do you notice about τ , σ , and τ_{max} ? Compare the fom'.

- 9-17** For a rectangular weld-bead track resisting bending, develop the necessary equations to treat cases of vertical welds, horizontal welds, and weld-all-around patterns with depth d and width b and allowing central gaps in parallel beads of length b_1 and d_1 . Do this by superposition of parallel tracks, vertical tracks subtracting out the gaps. Then put the two together for a rectangular weld bead with central gaps of length b_1 and d_1 . Show that the results are

$$A = 1.414(b - b_1 + d - d_1)h$$

$$I_u = \frac{(b - b_1)d^2}{2} + \frac{d^3 - d_1^3}{6}$$

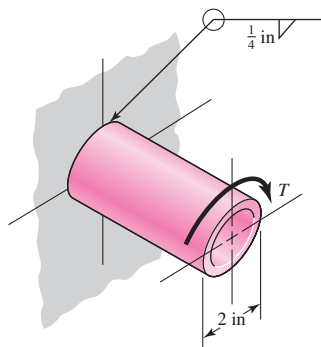
$$I = 0.707hI_u$$

$$l = 2(b - b_1) + 2(d - d_1)$$

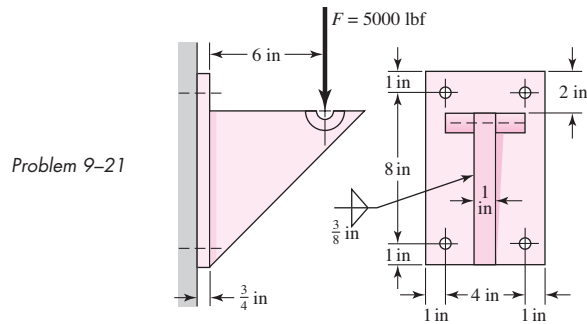
$$\text{fom} = \frac{I_u}{hl}$$

- 9-18** Write a computer program based on the Prob. 9-17 protocol. Solicit the largest allowable shear stress, the force F , and the clearance a , as well as the dimensions b and d . Begin an iterative loop by soliciting b_1 and d_1 . Either or both of these can be your design variables. Program to find the leg size corresponding to a shear-stress level at the maximum allowable at a corner. Output all your parameters including the figure of merit. Use the program to check any previous problems to which it is applicable. Play with it in a “what if” mode and learn from the trends in your parameters.
- 9-19** When comparing two different weldment patterns it is useful to observe the resistance to bending or torsion and the volume of weld metal deposited. Measure of effectiveness, defined as second moment of area divided by weld-metal volume, is useful. If a 6-in by 8-in section of a cantilever carries a static 10 kip bending load 10 in from the weldment plane, with an allowable shear stress of 12 800 psi realized, compare horizontal weldments with vertical weldments. The horizontal beads are to be 6 in long and the vertical beads, 8 in long.
- 9-20** A torque $T = 20(10^3)$ lbf · in is applied to the weldment shown. Estimate the maximum shear stress in the weld throat.

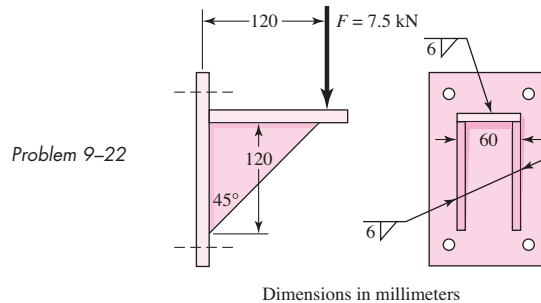
Problem 9-20



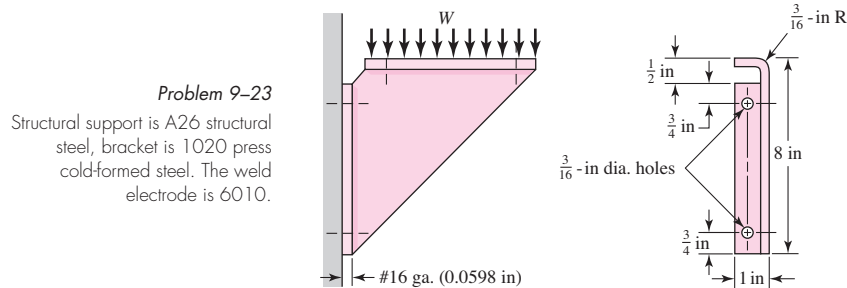
9-21 Find the maximum shear stress in the throat of the weld metal in the figure.



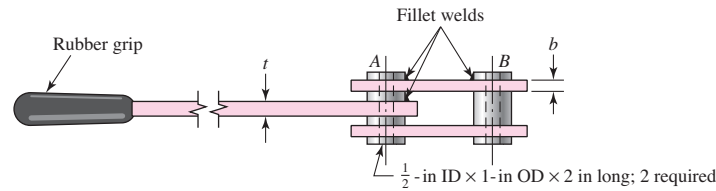
9-22 The figure shows a welded steel bracket loaded by a static force F . Estimate the factor of safety if the allowable shear stress in the weld throat is 120 MPa.



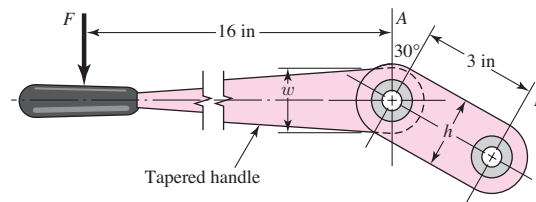
9-23 The figure shows a formed sheet-steel bracket. Instead of securing it to the support with machine screws, welding has been proposed. If the combined stress in the weld metal is limited to 900 psi, estimate the total load W the bracket will support. The dimensions of the top flange are the same as the mounting flange.



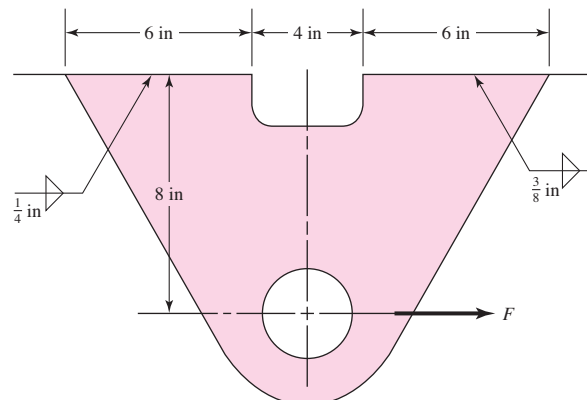
9-24 Without bracing, a machinist can exert only about 100 lbf on a wrench or tool handle. The lever shown in the figure has $t = \frac{1}{2}$ in and $w = 2$ in. We wish to specify the fillet-weld size to secure the lever to the tubular part at A. Both parts are of steel, and the shear stress in the weld throat should not exceed 3000 psi. Find a safe weld size.



Problem 9-24

**9-25**

Estimate the safe static load F for the weldment shown in the figure if an E6010 electrode is used and the design factor is to be 2. Use conventional analysis.

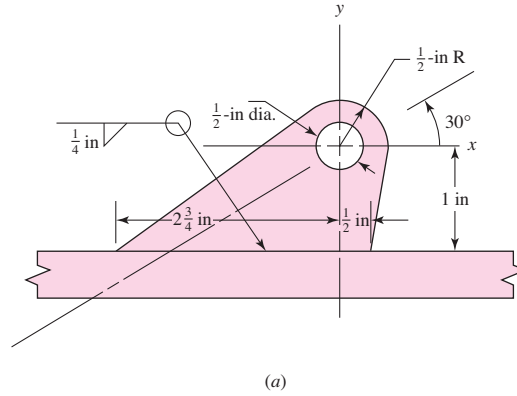


Problem 9-25

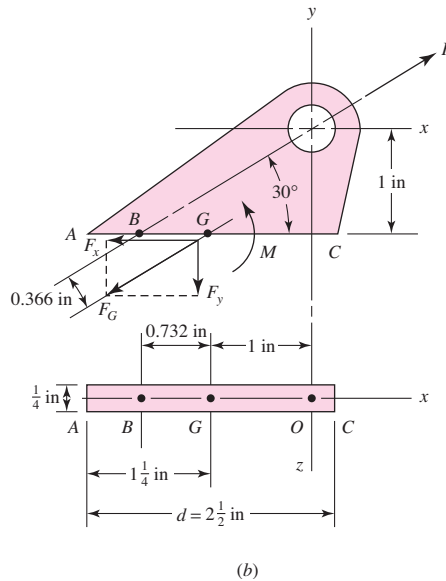
9-26

Brackets, such as the one shown, are used in mooring small watercraft. Failure of such brackets is usually caused by bearing pressure of the mooring clip against the side of the hole. Our purpose here is to get an idea of the static and dynamic margins of safety involved. We use a bracket $\frac{1}{4}$ in thick made of hot-rolled 1018 steel. We then assume wave action on the boat will create force F no greater than 1200 lbf.

- Identify the moment M that produces a shear stress on the throat resisting bending action with a "tension" at A and "compression" at C.
- Find the force component F_y that produces a shear stress at the throat resisting a "tension" throughout the weld.
- Find the force component F_x that produces an in-line shear throughout the weld.
- Find A , I_u , and I using Table 9-2, in part.
- Find the shear stress τ_1 at A due to F_y and M , the shear stress τ_2 due to F_x , and combine to find τ .
- Find the factor of safety guarding against shear yielding in the weldment.
- Find the factor of safety guarding against a static failure in the parent metal at the weld.
- Find the factor of safety guarding against a fatigue failure in the weld metal using a Gerber failure criterion.



Problem 9–26
Small watercraft mooring bracket.



9–27 For the sake of perspective it is always useful to look at the matter of scale. Double all dimensions in Prob. 9–5 and find the allowable load. By what factor has it increased? First make a guess, then carry out the computation. Would you expect the same ratio if the load had been variable?

9–28 Hardware stores often sell plastic hooks that can be mounted on walls with pressure-sensitive adhesive foam tape. Two designs are shown in (a) and (b) of the figure. Indicate which one you would buy and why.

9–29 For a balanced double-lap joint cured at room temperature, Volkersen's equation simplifies to

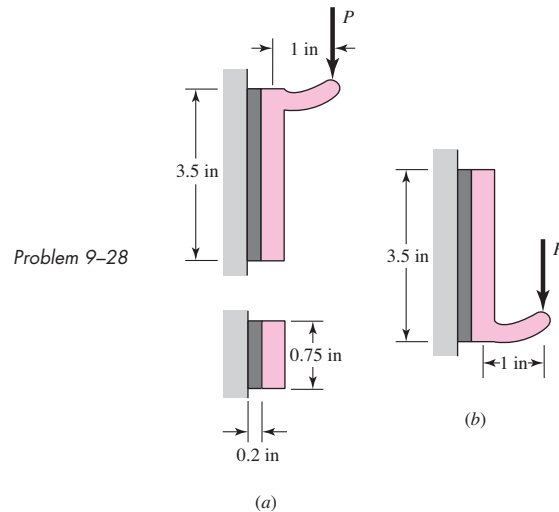
$$\tau(x) = \frac{P\omega \cosh(\omega x)}{4b \sinh(\omega l/2)} = A_1 \cosh(\omega x)$$

(a) Show that the average stress $\bar{\tau}$ is $P/(2bl)$.

(b) Show that the largest shear stress is $P\omega/[4b \tanh(\omega l/2)]$.

(c) Define a stress-augmentation factor K such that

$$\tau(l/2) = K\bar{\tau}$$



and it follows that

$$K = \frac{P\omega}{4b \tanh(\omega l/2)} \frac{2bl}{P} = \frac{\omega l/2}{\tanh(\omega l/2)} = \frac{\omega l \exp(\omega l/2) + \exp(-\omega l/2)}{2 \exp(\omega l/2) - \exp(-\omega l/2)}$$

9–30 Program the shear-lag solution for the shear-stress state into your computer using Eq. (9–7). Determine the maximum shear stress for each of the following scenarios:

Part	E_a , psi	t_o , in	t_i , in	E_o , psi	E_i , psi	h , in
a	$0.2(10^6)$	0.125	0.250	$30(10^6)$	$30(10^6)$	0.005
b	$0.2(10^6)$	0.125	0.250	$30(10^6)$	$30(10^6)$	0.015
c	$0.2(10^6)$	0.125	0.125	$30(10^6)$	$30(10^6)$	0.005
d	$0.2(10^6)$	0.125	0.250	$30(10^6)$	$10(10^6)$	0.005

Provide plots of the actual stress distributions predicted by this analysis. You may omit thermal stresses from the calculations, assuming that the service temperature is similar to the stress-free temperature. If the allowable shear stress is 800 psi and the load to be carried is 300 lbf, estimate the respective factors of safety for each geometry. Let $l = 1.25$ in and $b = 1$ in.

10

Mechanical Springs

Chapter Outline

10-1	Stresses in Helical Springs	500
10-2	The Curvature Effect	501
10-3	Deflection of Helical Springs	502
10-4	Compression Springs	502
10-5	Stability	504
10-6	Spring Materials	505
10-7	Helical Compression Spring Design for Static Service	510
10-8	Critical Frequency of Helical Springs	516
10-9	Fatigue Loading of Helical Compression Springs	518
10-10	Helical Compression Spring Design for Fatigue Loading	521
10-11	Extension Springs	524
10-12	Helical Coil Torsion Springs	532
10-13	Belleville Springs	539
10-14	Miscellaneous Springs	540
10-15	Summary	542

When a designer wants rigidity, negligible deflection is an acceptable approximation as long as it does not compromise function. Flexibility is sometimes needed and is often provided by metal bodies with cleverly controlled geometry. These bodies can exhibit flexibility to the degree the designer seeks. Such flexibility can be linear or nonlinear in relating deflection to load. These devices allow controlled application of force or torque; the storing and release of energy can be another purpose. Flexibility allows temporary distortion for access and the immediate restoration of function. Because of machinery's value to designers, springs have been intensively studied; moreover, they are mass-produced (and therefore low cost), and ingenious configurations have been found for a variety of desired applications. In this chapter we will discuss the more frequently used types of springs, their necessary parametric relationships, and their design.

In general, springs may be classified as wire springs, flat springs, or special-shaped springs, and there are variations within these divisions. Wire springs include helical springs of round or square wire, made to resist and deflect under tensile, compressive, or torsional loads. Flat springs include cantilever and elliptical types, wound motor- or clock-type power springs, and flat spring washers, usually called Belleville springs.

10-1 Stresses in Helical Springs

Figure 10-1*a* shows a round-wire helical compression spring loaded by the axial force F . We designate D as the *mean coil diameter* and d as the *wire diameter*. Now imagine that the spring is cut at some point (Fig. 10-1*b*), a portion of it removed, and the effect of the removed portion replaced by the net internal reactions. Then, as shown in the figure, from equilibrium the cut portion would contain a direct shear force F and a torsion $T = FD/2$.

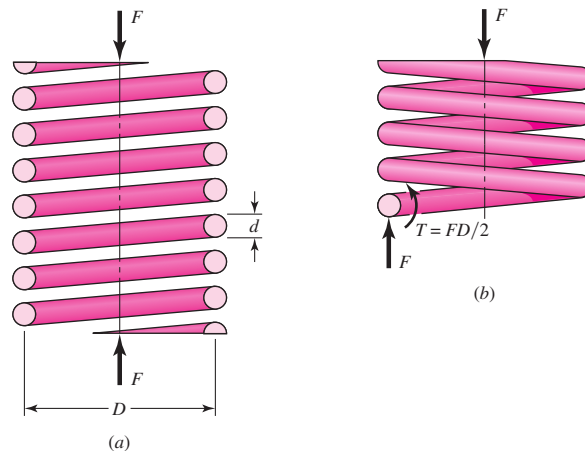
To visualize the torsion, picture a coiled garden hose. Now pull one end of the hose in a straight line perpendicular to the plane of the coil. As each turn of hose is pulled off the coil, the hose twists or turns about its own axis. The flexing of a helical spring creates a torsion in the wire in a similar manner.

The maximum stress in the wire may be computed by superposition of the direct shear stress given by Eq. (3-23), p. 85, and the torsional shear stress given by Eq. (3-37), p. 96. The result is

$$\tau_{\max} = \frac{Tr}{J} + \frac{F}{A} \quad (a)$$

Figure 10-1

(*a*) Axially loaded helical spring; (*b*) free-body diagram showing that the wire is subjected to a direct shear and a torsional shear.



at the *inside* fiber of the spring. Substitution of $\tau_{\max} = \tau$, $T = FD/2$, $r = d/2$, $J = \pi d^4/32$, and $A = \pi d^2/4$ gives

$$\tau = \frac{8FD}{\pi d^3} + \frac{4F}{\pi d^2} \quad (10-1)$$

Now we define the *spring index*

$$C = \frac{D}{d} \quad (10-2)$$

which is a measure of coil curvature. With this relation, Eq. (10-1) can be rearranged to give

$$\tau = K_s \frac{8FD}{\pi d^3} \quad (10-3)$$

where K_s is a *shear-stress correction factor* and is defined by the equation

$$K_s = \frac{2C + 1}{2C} \quad (10-4)$$

For most springs, C ranges from about 6 to 12. Equation (10-3) is quite general and applies for both static and dynamic loads.

The use of square or rectangular wire is not recommended for springs unless space limitations make it necessary. Springs of special wire shapes are not made in large quantities, unlike those of round wire; they have not had the benefit of refining development and hence may not be as strong as springs made from round wire. When space is severely limited, the use of nested round-wire springs should always be considered. They may have an economical advantage over the special-section springs, as well as a strength advantage.

10-2 The Curvature Effect

Equation (10-1) is based on the wire being straight. However, the curvature of the wire increases the stress on the inside of the spring but decreases it only slightly on the outside. This curvature stress is primarily important in fatigue because the loads are lower and there is no opportunity for localized yielding. For static loading, these stresses can normally be neglected because of strain-strengthening with the first application of load.

Unfortunately, it is necessary to find the curvature factor in a roundabout way. The reason for this is that the published equations also include the effect of the direct shear stress. Suppose K_s in Eq. (10-3) is replaced by another K factor, which corrects for both curvature and direct shear. Then this factor is given by either of the equations

$$K_W = \frac{4C - 1}{4C - 4} + \frac{0.615}{C} \quad (10-5)$$

$$K_B = \frac{4C + 2}{4C - 3} \quad (10-6)$$

The first of these is called the *Wahl factor*; and the second, the *Bergsträsser factor*.¹ Since the results of these two equations differ by less than 1 percent, Eq. (10-6) is

¹Cyril Samónov, "Some Aspects of Design of Helical Compression Springs," *Int. Symp. Design and Synthesis*, Tokyo, 1984.

preferred. The curvature correction factor can now be obtained by canceling out the effect of the direct shear. Thus, using Eq. (10–6) with Eq. (10–4), the curvature correction factor is found to be

$$K_c = \frac{K_B}{K_s} = \frac{2C(4C + 2)}{(4C - 3)(2C + 1)} \quad (10-7)$$

Now, K_s , K_B or K_W , and K_c are simply stress correction factors applied multiplicatively to $T\tau/J$ at the critical location to estimate a particular stress. There is *no* stress concentration factor. In this book we will use $\tau = K_B(8FD)/(\pi d^3)$ to predict the largest shear stress.

10–3 Deflection of Helical Springs

The deflection-force relations are quite easily obtained by using Castigliano's theorem. The total strain energy for a helical spring is composed of a torsional component and a shear component. From Eqs. (4–16) and (4–17), p. 156, the strain energy is

$$U = \frac{T^2 l}{2GJ} + \frac{F^2 l}{2AG} \quad (a)$$

Substituting $T = FD/2$, $l = \pi DN$, $J = \pi d^4/32$, and $A = \pi d^2/4$ results in

$$U = \frac{4F^2 D^3 N}{d^4 G} + \frac{2F^2 DN}{d^2 G} \quad (b)$$

where $N = N_a$ = number of active coils. Then using Castigliano's theorem, Eq. (4–20), p. 158, to find total deflection y gives

$$y = \frac{\partial U}{\partial F} = \frac{8FD^3 N}{d^4 G} + \frac{4FDN}{d^2 G} \quad (c)$$

Since $C = D/d$, Eq. (c) can be rearranged to yield

$$y = \frac{8FD^3 N}{d^4 G} \left(1 + \frac{1}{2C^2}\right) \doteq \frac{8FD^3 N}{d^4 G} \quad (10-8)$$

The spring rate, also called the *scale* of the spring, is $k = F/y$, and so

$$k \doteq \frac{d^4 G}{8D^3 N} \quad (10-9)$$

10–4 Compression Springs

The four types of ends generally used for compression springs are illustrated in Fig. 10–2. A spring with *plain ends* has a noninterrupted helicoid; the ends are the same as if a long spring had been cut into sections. A spring with plain ends that are *squared* or *closed* is obtained by deforming the ends to a zero-degree helix angle. Springs should always be both squared and ground for important applications, because a better transfer of the load is obtained.

Table 10–1 shows how the type of end used affects the number of coils and the spring length.² Note that the digits 0, 1, 2, and 3 appearing in Table 10–1 are often

²For a thorough discussion and development of these relations, see Cyril Samónov, "Computer-Aided Design of Helical Compression Springs," ASME paper No. 80-DET-69, 1980.

Figure 10-2

Types of ends for compression springs: (a) both ends plain; (b) both ends squared; (c) both ends squared and ground; (d) both ends plain and ground.

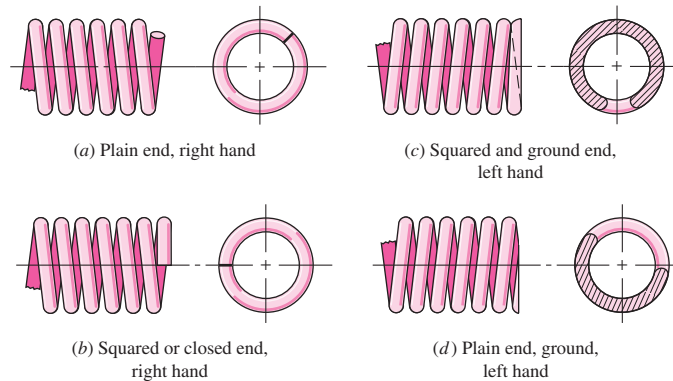


Table 10-1

Formulas for the
Dimensional
Characteristics of
Compression-Springs.
(N_a = Number of Active
Coils)

Source: From *Design
Handbook*, 1987, p. 32.
Courtesy of Associated
Spring.

Term	Type of Spring Ends			
	Plain	Plain and Ground	Squared or Closed	Squared and Ground
End coils, N_e	0	1	2	2
Total coils, N_t	N_a	$N_a + 1$	$N_a + 2$	$N_a + 2$
Free length, L_0	$pN_a + d$	$p(N_a + 1)$	$pN_a + 3d$	$pN_a + 2d$
Solid length, L_s	$d(N_t + 1)$	dN_t	$d(N_t + 1)$	dN_t
Pitch, p	$(l_0 - d)/N_a$	$l_0/(N_a + 1)$	$(l_0 - 3d)/N_a$	$(l_0 - 2d)/N_a$

used without question. *Some of these need closer scrutiny as they may not be integers.* This depends on how a springmaker forms the ends. Forsy's³ pointed out that squared and ground ends give a solid length L_s of

$$L_s = (N_t - a)d$$

where a varies, with an average of 0.75, so the entry dN_t in Table 10-1 may be overstated. The way to check these variations is to take springs from a particular springmaker, close them solid, and measure the solid height. Another way is to look at the spring and count the wire diameters in the solid stack.

Set removal or *presetting* is a process used in the manufacture of compression springs to induce useful residual stresses. It is done by making the spring longer than needed and then compressing it to its solid height. This operation *sets* the spring to the required final free length and, since the torsional yield strength has been exceeded, induces residual stresses opposite in direction to those induced in service. Springs to be preset should be designed so that 10 to 30 percent of the initial free length is removed during the operation. If the stress at the solid height is greater than 1.3 times the torsional yield strength, distortion may occur. If this stress is much less than 1.1 times, it is difficult to control the resulting free length.

Set removal increases the strength of the spring and so is especially useful when the spring is used for energy-storage purposes. However, set removal should not be used when springs are subject to fatigue.

³Edward L. Forsy, "Accurate Spring Heights," *Machine Design*, vol. 56, no. 2, January 26, 1984.

10–5 Stability

In Chap. 4 we learned that a column will buckle when the load becomes too large. Similarly, compression coil springs may buckle when the deflection becomes too large. The critical deflection is given by the equation

$$y_{cr} = L_0 C_1' \left[1 - \left(1 - \frac{C_2'}{\lambda_{eff}^2} \right)^{1/2} \right] \quad (10-10)$$

where y_{cr} is the deflection corresponding to the onset of instability. Samónov⁴ states that this equation is cited by Wahl⁵ and verified experimentally by Haringx.⁶ The quantity λ_{eff} in Eq. (10–10) is the *effective slenderness ratio* and is given by the equation

$$\lambda_{eff} = \frac{\alpha L_0}{D} \quad (10-11)$$

C_1' and C_2' are elastic constants defined by the equations

$$C_1' = \frac{E}{2(E - G)}$$

$$C_2' = \frac{2\pi^2(E - G)}{2G + E}$$

Equation (10–11) contains the *end-condition constant* α . This depends upon how the ends of the spring are supported. Table 10–2 gives values of α for usual end conditions. Note how closely these resemble the end conditions for columns.

Absolute stability occurs when, in Eq. (10–10), the term C_2'/λ_{eff}^2 is greater than unity. This means that the condition for absolute stability is that

$$L_0 < \frac{\pi D}{\alpha} \left[\frac{2(E - G)}{2G + E} \right]^{1/2} \quad (10-12)$$

Table 10–2

End-Condition
Constants α for Helical
Compression Springs*

End Condition	Constant α
Spring supported between flat parallel surfaces (fixed ends)	0.5
One end supported by flat surface perpendicular to spring axis (fixed); other end pivoted (hinged)	0.707
Both ends pivoted (hinged)	1
One end clamped; other end free	2

*Ends supported by flat surfaces must be squared and ground.

⁴Cyril Samónov “Computer-Aided Design,” op. cit.

⁵A. M. Wahl, *Mechanical Springs*, 2d ed., McGraw-Hill, New York, 1963.

⁶J. A. Haringx, “On Highly Compressible Helical Springs and Rubber Rods and Their Application for Vibration-Free Mountings,” I and II, *Philips Res. Rep.*, vol. 3, December 1948, pp. 401–449, and vol. 4, February 1949, pp. 49–80

For steels, this turns out to be

$$L_0 < 2.63 \frac{D}{\alpha} \quad (10-13)$$

For squared and ground ends $\alpha = 0.5$ and $L_0 < 5.26D$.

10-6 Spring Materials

Springs are manufactured either by hot- or cold-working processes, depending upon the size of the material, the spring index, and the properties desired. In general, pre-hardened wire should not be used if $D/d < 4$ or if $d > \frac{1}{4}$ in. Winding of the spring induces residual stresses through bending, but these are normal to the direction of the torsional working stresses in a coil spring. Quite frequently in spring manufacture, they are relieved, after winding, by a mild thermal treatment.

A great variety of spring materials are available to the designer, including plain carbon steels, alloy steels, and corrosion-resisting steels, as well as nonferrous materials such as phosphor bronze, spring brass, beryllium copper, and various nickel alloys. Descriptions of the most commonly used steels will be found in Table 10-3. The UNS steels listed in Appendix A should be used in designing hot-worked, heavy-coil springs, as well as flat springs, leaf springs, and torsion bars.

Spring materials may be compared by an examination of their tensile strengths; these vary so much with wire size that they cannot be specified until the wire size is known. The material and its processing also, of course, have an effect on tensile strength. It turns out that the graph of tensile strength versus wire diameter is almost a straight line for some materials when plotted on log-log paper. Writing the equation of this line as

$$S_{ut} = \frac{A}{d^m} \quad (10-14)$$

furnishes a good means of estimating minimum tensile strengths when the intercept A and the slope m of the line are known. Values of these constants have been worked out from recent data and are given for strengths in units of kpsi and MPa in Table 10-4. In Eq. (10-14) when d is measured in millimeters, then A is in $\text{MPa} \cdot \text{mm}^m$ and when d is measured in inches, then A is in $\text{kpsi} \cdot \text{in}^m$.

Although the torsional yield strength is needed to design the spring and to analyze the performance, spring materials customarily are tested only for tensile strength—perhaps because it is such an easy and economical test to make. A very rough estimate of the torsional yield strength can be obtained by assuming that the tensile yield strength is between 60 and 90 percent of the tensile strength. Then the distortion-energy theory can be employed to obtain the torsional yield strength ($S_{ys} = 0.577S_y$). This approach results in the range

$$0.35S_{ut} \leq S_{ys} \leq 0.52S_{ut} \quad (10-15)$$

for steels.

For wires listed in Table 10-5, the maximum allowable shear stress in a spring can be seen in column 3. Music wire and hard-drawn steel spring wire have a low end of range $S_{sy} = 0.45S_{ut}$. Valve spring wire, Cr-Va, Cr-Si, and other (not shown) hardened and tempered carbon and low-alloy steel wires as a group have $S_{sy} \geq 0.50S_{ut}$. Many nonferrous materials (not shown) as a group have $S_{sy} \geq 0.35S_{ut}$. In view of this,

Table 10-3High-Carbon and Alloy
Spring Steels

Source: From Harold C. R. Carlson, "Selection and Application of Spring Materials," *Mechanical Engineering*, vol. 78, 1956, pp. 331–334.

Name of Material	Similar Specifications	Description
Music wire, 0.80–0.95C	UNS G10850 AISI 1085 ASTM A228-51	This is the best, toughest, and most widely used of all spring materials for small springs. It has the highest tensile strength and can withstand higher stresses under repeated loading than any other spring material. Available in diameters 0.12 to 3 mm (0.005 to 0.125 in). Do not use above 120°C (250°F) or at subzero temperatures.
Oil-tempered wire, 0.60–0.70C	UNS G10650 AISI 1065 ASTM 229-41	This general-purpose spring steel is used for many types of coil springs where the cost of music wire is prohibitive and in sizes larger than available in music wire. Not for shock or impact loading. Available in diameters 3 to 12 mm (0.125 to 0.5000 in), but larger and smaller sizes may be obtained. Not for use above 180°C (350°F) or at subzero temperatures.
Hard-drawn wire, 0.60–0.70C	UNS G10660 AISI 1066 ASTM A227-47	This is the cheapest general-purpose spring steel and should be used only where life, accuracy, and deflection are not too important. Available in diameters 0.8 to 12 mm (0.031 to 0.500 in). Not for use above 120°C (250°F) or at subzero temperatures.
Chrome-vanadium	UNS G61500 AISI 6150 ASTM 231-41	This is the most popular alloy spring steel for conditions involving higher stresses than can be used with the high-carbon steels and for use where fatigue resistance and long endurance are needed. Also good for shock and impact loads. Widely used for aircraft-engine valve springs and for temperatures to 220°C (425°F). Available in annealed or pretempered sizes 0.8 to 12 mm (0.031 to 0.500 in) in diameter.
Chrome-silicon	UNS G92540 AISI 9254	This alloy is an excellent material for highly stressed springs that require long life and are subjected to shock loading. Rockwell hardnesses of C50 to C53 are quite common, and the material may be used up to 250°C (475°F). Available from 0.8 to 12 mm (0.031 to 0.500 in) in diameter.

Table 10–4

Constants A and m of $S_{ut} = A/d^m$ for Estimating Minimum Tensile Strength of Common Spring Wires

Source: From *Design Handbook*, 1987, p. 19. Courtesy of Associated Spring.

Material	ASTM No.	Exponent m	Diameter, in	A , kpsi · in ^{m}	Diameter, mm	A , MPa · mm ^{m}	Relative Cost of wire
Music wire*	A228	0.145	0.004–0.256	201	0.10–6.5	2211	2.6
OQ&T wire†	A229	0.187	0.020–0.500	147	0.5–12.7	1855	1.3
Hard-drawn wire‡	A227	0.190	0.028–0.500	140	0.7–12.7	1783	1.0
Chrome-vanadium wire§	A232	0.168	0.032–0.437	169	0.8–11.1	2005	3.1
Chrome-silicon wire	A401	0.108	0.063–0.375	202	1.6–9.5	1974	4.0
302 Stainless wire#	A313	0.146	0.013–0.10	169	0.3–2.5	1867	7.6–11
		0.263	0.10–0.20	128	2.5–5	2065	
		0.478	0.20–0.40	90	5–10	2911	
Phosphor-bronze wire**	B159	0	0.004–0.022	145	0.1–0.6	1000	8.0
		0.028	0.022–0.075	121	0.6–2	913	
		0.064	0.075–0.30	110	2–7.5	932	

*Surface is smooth, free of defects, and has a bright, lustrous finish.

†Has a slight heat-treating scale which must be removed before plating.

‡Surface is smooth and bright with no visible marks.

§Aircraft-quality tempered wire, can also be obtained annealed.

|| Tempered to Rockwell C49, but may be obtained untempered.

#Type 302 stainless steel.

**Temper CA510.

Joerres⁷ uses the maximum allowable torsional stress for static application shown in Table 10–6. For specific materials for which you have torsional yield information use this table as a guide. Joerres provides set-removal information in Table 10–6, that $S_{sy} \geq 0.65S_{ut}$ increases strength through cold work, but at the cost of an additional operation by the springmaker. Sometimes the additional operation can be done by the manufacturer during assembly. Some correlations with carbon steel springs show that the tensile yield strength of spring wire in torsion can be estimated from $0.75S_{ut}$. The corresponding estimate of the yield strength in shear based on distortion energy theory is $S_{sy} = 0.577(0.75)S_{ut} = 0.433S_{ut} \doteq 0.45S_{ut}$. Samónov discusses the problem of allowable stress and shows that

$$S_{sy} = \tau_{all} = 0.56S_{ut} \quad (10-16)$$

for high-tensile spring steels, which is close to the value given by Joerres for hardened alloy steels. He points out that this value of allowable stress is specified by Draft Standard 2089 of the German Federal Republic when Eq. (10–3) is used without stress-correction factor.

⁷Robert E. Joerres, “Springs,” Chap. 6 in Joseph E. Shigley, Charles R. Mischke, and Thomas H. Brown, Jr. (eds.), *Standard Handbook of Machine Design*, 3rd ed., McGraw-Hill, New York, 2004.

Table 10-5

Mechanical Properties of Some Spring Wires

Material	Elastic Limit, Percent of S_{ut}		Diameter d , in	E		G	
	Tension	Torsion		Mpsi	GPa	Mpsi	GPa
Music wire A228	65–75	45–60	<0.032	29.5	203.4	12.0	82.7
			0.033–0.063	29.0	200	11.85	81.7
			0.064–0.125	28.5	196.5	11.75	81.0
			>0.125	28.0	193	11.6	80.0
HD spring A227	60–70	45–55	<0.032	28.8	198.6	11.7	80.7
			0.033–0.063	28.7	197.9	11.6	80.0
			0.064–0.125	28.6	197.2	11.5	79.3
			>0.125	28.5	196.5	11.4	78.6
Oil tempered A239	85–90	45–50		28.5	196.5	11.2	77.2
Valve spring A230	85–90	50–60		29.5	203.4	11.2	77.2
Chrome-vanadium A231	88–93	65–75		29.5	203.4	11.2	77.2
A232	88–93			29.5	203.4	11.2	77.2
Chrome-silicon A401	85–93	65–75		29.5	203.4	11.2	77.2
Stainless steel							
A313*	65–75	45–55		28	193	10	69.0
17-7PH	75–80	55–60		29.5	208.4	11	75.8
414	65–70	42–55		29	200	11.2	77.2
420	65–75	45–55		29	200	11.2	77.2
431	72–76	50–55		30	206	11.5	79.3
Phosphor-bronze B159	75–80	45–50		15	103.4	6	41.4
Beryllium-copper B197	70	50		17	117.2	6.5	44.8
	75	50–55		19	131	7.3	50.3
Inconel alloy X-750	65–70	40–45		31	213.7	11.2	77.2

*Also includes 302, 304, and 316.

Note: See Table 10-6 for allowable torsional stress design values.

Table 10-6Maximum Allowable
Torsional Stresses for
Helical Compression
Springs in Static
ApplicationsSource: Robert E. Joerres,
"Springs," Chap. 6 in Joseph
E. Shigley, Charles R.
Mischke, and Thomas H.
Brown, Jr. (eds.), *Standard
Handbook of Machine
Design*, 3rd ed., McGraw-Hill,
New York, 2004.

Material	Maximum Percent of Tensile Strength	
	Before Set Removed (includes K_W or K_B)	After Set Removed (includes K_s)
Music wire and cold-drawn carbon steel	45	60–70
Hardened and tempered carbon and low-alloy steel	50	65–75
Austenitic stainless steels	35	55–65
Nonferrous alloys	35	55–65

EXAMPLE 10-1

A helical compression spring is made of no. 16 music wire. The outside diameter of the spring is $\frac{7}{16}$ in. The ends are squared and there are $12\frac{1}{2}$ total turns.

- (a) Estimate the torsional yield strength of the wire.
- (b) Estimate the static load corresponding to the yield strength.
- (c) Estimate the scale of the spring.
- (d) Estimate the deflection that would be caused by the load in part (b).
- (e) Estimate the solid length of the spring.
- (f) What length should the spring be to ensure that when it is compressed solid and then released, there will be no permanent change in the free length?
- (g) Given the length found in part (f), is buckling a possibility?
- (h) What is the pitch of the body coil?

Solution

(a) From Table A-28, the wire diameter is $d = 0.037$ in. From Table 10-4, we find $A = 201$ kpsi \cdot in^{*m*} and $m = 0.145$. Therefore, from Eq. (10-14)

$$S_{ut} = \frac{A}{d^m} = \frac{201}{0.037^{0.145}} = 324 \text{ kpsi}$$

Then, from Table 10-6,

Answer

$$S_{sy} = 0.45S_{ut} = 0.45(324) = 146 \text{ kpsi}$$

(b) The mean spring coil diameter is $D = \frac{7}{16} - 0.037 = 0.400$ in, and so the spring index is $C = 0.400/0.037 = 10.8$. Then, from Eq. (10-6),

$$K_B = \frac{4C + 2}{4C - 3} = \frac{4(10.8) + 2}{4(10.8) - 3} = 1.124$$

Now rearrange Eq. (10-3) replacing K_s and τ with K_B and S_{sy} , respectively, and solve for F :

Answer

$$F = \frac{\pi d^3 S_{sy}}{8K_B D} = \frac{\pi(0.037^3)146(10^3)}{8(1.124)0.400} = 6.46 \text{ lbf}$$

(c) From Table 10-1, $N_a = 12.5 - 2 = 10.5$ turns. In Table 10-5, $G = 11.85$ Mpsi, and the scale of the spring is found to be, from Eq. (10-9),

Answer

$$k = \frac{d^4 G}{8D^3 N_a} = \frac{0.037^4 (11.85)10^6}{8(0.400^3)10.5} = 4.13 \text{ lbf/in}$$

Answer

(d)
$$y = \frac{F}{k} = \frac{6.46}{4.13} = 1.56 \text{ in}$$

(e) From Table 10-1,

Answer

$$L_s = (N_t + 1)d = (12.5 + 1)0.037 = 0.500 \text{ in}$$

Answer

(f)
$$L_0 = y + L_s = 1.56 + 0.500 = 2.06 \text{ in.}$$

(g) To avoid buckling, Eq. (10-13) and Table 10-2 give

$$L_0 < 2.63 \frac{D}{\alpha} = 2.63 \frac{0.400}{0.5} = 2.10 \text{ in}$$

Mathematically, a free length of 2.06 in is less than 2.10 in, and buckling is unlikely. However, the forming of the ends will control how close α is to 0.5. This has to be investigated and an inside rod or exterior tube or hole may be needed.

(h) Finally, from Table 10–1, the pitch of the body coil is

Answer
$$p = \frac{L_0 - 3d}{N_a} = \frac{2.06 - 3(0.037)}{10.5} = 0.186 \text{ in}$$

10–7 Helical Compression Spring Design for Static Service

The preferred range of spring index is $4 \leq C \leq 12$, with the lower indexes being more difficult to form (because of the danger of surface cracking) and springs with higher indexes tending to tangle often enough to require individual packing. This can be the first item of the design assessment. The recommended range of active turns is $3 \leq N_a \leq 15$. To maintain linearity when a spring is about to close, it is necessary to avoid the gradual touching of coils (due to nonperfect pitch). A helical coil spring force-deflection characteristic is ideally linear. Practically, it is nearly so, but not at each end of the force-deflection curve. The spring force is not reproducible for very small deflections, and near closure, nonlinear behavior begins as the number of active turns diminishes as coils begin to touch. The designer confines the spring's operating point to the central 75 percent of the curve between no load, $F = 0$, and closure, $F = F_s$. Thus, the maximum operating force should be limited to $F_{\max} \leq \frac{7}{8}F_s$. Defining the fractional overrun to closure as ξ , where

$$F_s = (1 + \xi)F_{\max} \quad (10-17)$$

it follows that

$$F_s = (1 + \xi)F_{\max} = (1 + \xi) \left(\frac{7}{8} \right) F_s$$

From the outer equality $\xi = 1/7 = 0.143 \doteq 0.15$. Thus, it is recommended that $\xi \geq 0.15$.

In addition to the relationships and material properties for springs, we now have some recommended design conditions to follow, namely:

$$4 \leq C \leq 12 \quad (10-18)$$

$$3 \leq N_a \leq 15 \quad (10-19)$$

$$\xi \geq 0.15 \quad (10-20)$$

$$n_s \geq 1.2 \quad (10-21)$$

where n_s is the factor of safety at closure (solid height).

When considering designing a spring for high volume production, the figure of merit can be the cost of the wire from which the spring is wound. The fom would be proportional to the relative material cost, weight density, and volume:

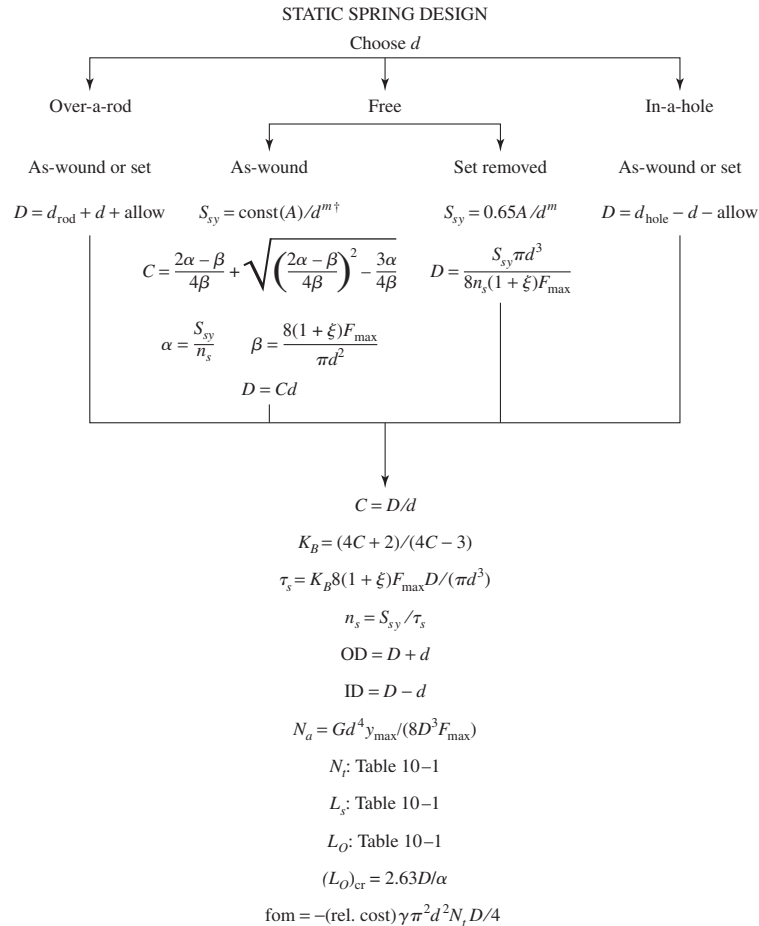
$$\text{fom} = -(\text{relative material cost}) \frac{\gamma \pi^2 d^2 N_t D}{4} \quad (10-22)$$

For comparisons between steels, the specific weight γ can be omitted.

Spring design is an open-ended process. There are many decisions to be made, and many possible solution paths as well as solutions. In the past, charts, nomographs,

Figure 10-3

Helical coil compression spring design flowchart for static loading.



Print or display: $d, D, C, \text{OD}, \text{ID}, N_a, N_f, L_s, L_0, (L_0)_{\text{cr}}, n_s, \text{fom}$

Build a table, conduct design assessment by inspection

Eliminate infeasible designs by showing active constraints

Choose among satisfactory designs using the figure of merit

[†] const is found from Table 10-6

and “spring design slide rules” were used by many to simplify the spring design problem. Today, the computer enables the designer to create programs in many different formats—direct programming, spreadsheet, MATLAB, etc. Commercial programs are also available.⁸ There are almost as many ways to create a spring-design program as there are programmers. Here, we will suggest one possible design approach.

Design Strategy

Make the a priori decisions, with hard-drawn steel wire the first choice (relative material cost is 1.0). Choose a wire size d . With all decisions made, generate a column of parameters: d, D, C, OD or $\text{ID}, N_a, L_s, L_0, (L_0)_{\text{cr}}, n_s$, and fom . By incrementing wire sizes available, we can scan the table of parameters and apply the design recommendations by inspection. After wire sizes are eliminated, choose the spring design with the highest figure of merit. This will give the optimal design despite the presence

⁸For example, see *Advanced Spring Design*, a program developed jointly between the Spring Manufacturers Institute (SMI), www.smihq.org, and Universal Technical Systems, Inc. (UTS), www.uts.com.

of a discrete design variable d and aggregation of equality and inequality constraints. The column vector of information can be generated by using the flowchart displayed in Fig. 10–3. It is general enough to accommodate to the situations of as-wound and set-removed springs, operating over a rod, or in a hole free of rod or hole. In as-wound springs the controlling equation must be solved for the spring index as follows. From Eq. (10–3) with $\tau = S_{sy}/n_s$, $C = D/d$, K_B from Eq. (10–6), and Eq. (10–17),

$$\frac{S_{sy}}{n_s} = K_B \frac{8F_s D}{\pi d^3} = \frac{4C + 2}{4C - 3} \left[\frac{8(1 + \xi) F_{\max} C}{\pi d^2} \right] \quad (a)$$

Let

$$\alpha = \frac{S_{sy}}{n_s} \quad (b)$$

$$\beta = \frac{8(1 + \xi) F_{\max}}{\pi d^2} \quad (c)$$

Substituting Eqs. (b) and (c) into (a) and simplifying yields a quadratic equation in C . The larger of the two solutions will yield the spring index

$$C = \frac{2\alpha - \beta}{4\beta} + \sqrt{\left(\frac{2\alpha - \beta}{4\beta}\right)^2 - \frac{3\alpha}{4\beta}} \quad (10-23)$$

EXAMPLE 10-2

A music wire helical compression spring is needed to support a 20-lbf load after being compressed 2 in. Because of assembly considerations the solid height cannot exceed 1 in and the free length cannot be more than 4 in. Design the spring.

Solution

The a priori decisions are

- Music wire, A228; from Table 10–4, $A = 201\,000$ psi-in^{*m*}; $m = 0.145$; from Table 10–5, $E = 28.5$ Mpsi, $G = 11.75$ Mpsi (expecting $d > 0.064$ in)
- Ends squared and ground
- Function: $F_{\max} = 20$ lbf, $y_{\max} = 2$ in
- Safety: use design factor at solid height of $(n_s)_d = 1.2$
- Robust linearity: $\xi = 0.15$
- Use as-wound spring (cheaper), $S_{sy} = 0.45S_{ut}$ from Table 10–6
- Decision variable: $d = 0.080$ in, music wire gage #30, Table A–28. From Fig. 10–3 and Table 10–6,

$$S_{sy} = 0.45 \frac{201\,000}{0.080^{0.145}} = 130\,455 \text{ psi}$$

From Fig. 10–3 or Eq. (10–23)

$$\alpha = \frac{S_{sy}}{n_s} = \frac{130\,455}{1.2} = 108\,713 \text{ psi}$$

$$\beta = \frac{8(1 + \xi)F_{\max}}{\pi d^2} = \frac{8(1 + 0.15)20}{\pi(0.080^2)} = 9151.4 \text{ psi}$$

$$C = \frac{2(108\,713) - 9151.4}{4(9151.4)} + \sqrt{\left[\frac{2(108\,713) - 9151.4}{4(9151.4)}\right]^2 - \frac{3(108\,713)}{4(9151.4)}} = 10.53$$

Continuing with Fig. 10–3:

$$D = Cd = 10.53(0.080) = 0.8424$$

$$K_B = \frac{4(10.53) + 2}{4(10.53) - 3} = 1.128$$

$$\tau_s = 1.128 \frac{8(1 + 0.15)20(0.8424)}{\pi(0.080)^3} = 108\,700 \text{ psi}$$

$$n_s = \frac{130\,445}{108\,700} = 1.2$$

$$\text{OD} = 0.843 + 0.080 = 0.923 \text{ in}$$

$$N_a = \frac{0.080^4(11.75)10^6(2)}{8(0.843)^3 20} = 10.05 \text{ turns}$$

$$N_t = 10.05 + 2 = 12.05 \text{ total turns}$$

$$L_s = 0.080(12.05) = 0.964 \text{ in}$$

$$L_0 = 0.964 + (1 + 0.15)2 = 3.264 \text{ in}$$

$$(L_0)_{cr} = 2.63(0.843/0.5) = 4.43 \text{ in}$$

$$\text{fom} = -2.6\pi^2(0.080)^2 12.05(0.843)/4 = -0.417$$

Repeat the above for other wire diameters and form a table (easily accomplished with a spreadsheet program):

<i>d</i> :	0.063	0.067	0.071	0.075	0.080	0.085	0.090	0.095
<i>D</i>	0.391	0.479	0.578	0.688	0.843	1.017	1.211	1.427
<i>C</i>	6.205	7.153	8.143	9.178	10.53	11.96	13.46	15.02
OD	0.454	0.546	0.649	0.763	0.923	1.102	1.301	1.522
<i>N_a</i>	39.1	26.9	19.3	14.2	10.1	7.3	5.4	4.1
<i>L_s</i>	2.587	1.936	1.513	1.219	0.964	0.790	0.668	0.581
<i>L₀</i>	4.887	4.236	3.813	3.519	3.264	3.090	2.968	2.881
<i>(L₀)_{cr}</i>	2.06	2.52	3.04	3.62	4.43	5.35	6.37	7.51
<i>n_s</i>	1.2	1.2	1.2	1.2	1.2	1.2	1.2	1.2
fom	-0.409	-0.399	-0.398	-0.404	-0.417	-0.438	-0.467	-0.505

Now examine the table and perform the adequacy assessment. The constraint $3 \leq N_a \leq 15$ rules out wire diameters less than 0.075 in. The spring index constraint $4 \leq C \leq 12$ rules out diameters larger than 0.085 in. The $L_s \leq 1$ constraint rules out diameters less than 0.080 in. The $L_0 \leq 4$ constraint rules out diameters less than 0.071 in. The buckling criterion rules out free lengths longer than $(L_0)_{cr}$, which rules out diameters

less than 0.075 in. The factor of safety n_s is exactly 1.20 because the mathematics forced it. Had the spring been in a hole or over a rod, the helix diameter would be chosen without reference to $(n_s)_d$. The result is that there are only two springs in the feasible domain, one with a wire diameter of 0.080 in and the other with a wire diameter of 0.085. The figure of merit decides and the decision is the design with 0.080 in wire diameter.

Having designed a spring, will we have it made to our specifications? Not necessarily. There are vendors who stock literally thousands of music wire compression springs. By browsing their catalogs, we will usually find several that are close. Maximum deflection and maximum load are listed in the display of characteristics. Check to see if this allows soliding without damage. Often it does not. Spring rates may only be close. At the very least this situation allows a small number of springs to be ordered “off the shelf” for testing. The decision often hinges on the economics of special order versus the acceptability of a close match.

EXAMPLE 10-3

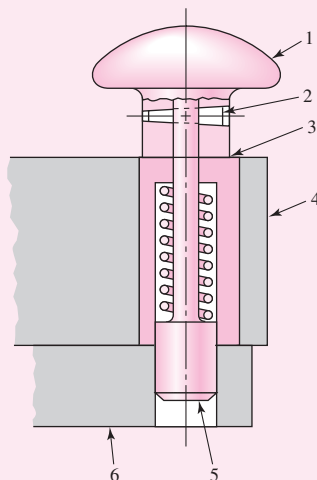
Indexing is used in machine operations when a circular part being manufactured must be divided into a certain number of segments. Figure 10-4 shows a portion of an indexing fixture used to successively position a part for the operation. When the knob is momentarily pulled up, part 6, which holds the workpiece, is rotated about a vertical axis to the next position and locked in place by releasing the index pin. In this example we wish to design the spring to exert a force of about 3 lbf and to fit in the space defined in the figure caption.

Solution

Since the fixture is not a high-production item, a stock spring will be selected. These are available in music wire. In one catalog there are 76 stock springs available having an outside diameter of 0.480 in and designed to work in a $\frac{1}{2}$ -in hole. These are made in seven different wire sizes, ranging from 0.038 up to 0.063 in, and in free lengths from $\frac{1}{2}$ to $2\frac{1}{2}$ in, depending upon the wire size.

Figure 10-4

Part 1, pull knob; part 2, tapered retaining pin; part 3, hardened bushing with press fit; part 4, body of fixture; part 5, indexing pin; part 6, workpiece holder. Space of the spring is $\frac{5}{8}$ in OD, $\frac{1}{4}$ in ID, and $1\frac{3}{8}$ in long, with the pin down as shown. The pull knob must be raised $\frac{3}{4}$ in to permit indexing.



Since the pull knob must be raised $\frac{3}{4}$ in for indexing and the space for the spring is $1\frac{3}{8}$ in long when the pin is down, the solid length cannot be more than $\frac{5}{8}$ in.

Let us begin by selecting a spring having an outside diameter of 0.480 in, a wire size of 0.051 in, a free length of $1\frac{3}{4}$ in, $11\frac{1}{2}$ total turns, and plain ends. Then $m = 0.145$ and $A = 201 \text{ kpsi} \cdot \text{in}^m$ for music wire. Then

$$S_{sy} = 0.45 \frac{A}{d^m} = 0.45 \frac{201}{0.051^{0.145}} = 139.3 \text{ kpsi}$$

With plain ends, from Table 10–1, the number of active turns is

$$N_a = N_t = 11.5 \text{ turns}$$

The mean coil diameter is $D = \text{OD} - d = 0.480 - 0.051 = 0.429$ in. From Eq. (10–9) the spring rate is, for $G = 11.85(10^6)$ psi from Table 10–5,

$$k = \frac{d^4 G}{8D^3 N_a} = \frac{0.051^4 (11.85) 10^6}{8(0.429)^3 11.5} = 11.0 \text{ lbf/in}$$

From Table 10–1, the solid height L_s is

$$L_s = d(N_t + 1) = 0.051(11.5 + 1) = 0.638 \text{ in}$$

The spring force when the pin is down, F_{\min} , is

$$F_{\min} = ky_{\min} = 11.0(1.75 - 1.375) = 4.13 \text{ lbf}$$

When the spring is compressed solid, the spring force F_s is

$$F_s = ky_s = k(L_0 - L_s) = 11.0(1.75 - 0.638) = 12.2 \text{ lbf}$$

Since the spring index is $C = D/d = 0.429/0.051 = 8.41$,

$$K_B = \frac{4C + 2}{4C - 3} = \frac{4(8.41) + 2}{4(8.41) - 3} = 1.163$$

and for the as-wound spring, the shear stress when compressed solid is

$$\tau_s = K_B \frac{8F_s D}{\pi d^3} = 1.163 \frac{8(12.2)0.429}{\pi(0.051)^3} = 116 \text{ 850 psi}$$

The factor of safety when the spring is compressed solid is

$$n_s = \frac{S_{sy}}{\tau_s} = \frac{139.3}{116.9} = 1.19$$

Since n_s is marginally adequate and L_s is larger than $\frac{5}{8}$ in, we must investigate other springs with a smaller wire size. After several investigations another spring has possibilities. It is as-wound music wire, $d = 0.045$ in, 20 gauge (see Table A–25) OD = 0.480 in, $N_t = 11.5$ turns, $L_0 = 1.75$ in. S_{sy} is still 139.3 kpsi, and

$$D = \text{OD} - d = 0.480 - 0.045 = 0.435 \text{ in}$$

$$N_a = N_t = 11.5 \text{ turns}$$

$$k = \frac{0.045^4 (11.85) 10^6}{8(0.435)^3 11.5} = 6.42 \text{ lbf/in}$$

$$L_s = d(N_t + 1) = 0.045(11.5 + 1) = 0.563 \text{ in}$$

$$F_{\min} = ky_{\min} = 6.42(1.75 - 1.375) = 2.41 \text{ lbf}$$

$$F_s = 6.42(1.75 - 0.563) = 7.62 \text{ lbf}$$

$$C = \frac{D}{d} = \frac{0.435}{0.045} = 9.67$$

$$K_B = \frac{4(9.67) + 2}{4(9.67) - 3} = 1.140$$

$$\tau_s = 1.140 \frac{8(7.62)0.435}{\pi(0.045)^3} = 105\,600 \text{ psi}$$

$$n_s = \frac{S_{sy}}{\tau_s} = \frac{139.3}{105.6} = 1.32$$

Now $n_s > 1.2$, buckling is not possible as the coils are guarded by the hole surface, and the solid length is less than $\frac{5}{8}$ in, so this spring is selected. By using a stock spring, we take advantage of economy of scale.

10–8 Critical Frequency of Helical Springs

If a wave is created by a disturbance at one end of a swimming pool, this wave will travel down the length of the pool, be reflected back at the far end, and continue in this back-and-forth motion until it is finally damped out. The same effect occurs in helical springs, and it is called *spring surge*. If one end of a compression spring is held against a flat surface and the other end is disturbed, a compression wave is created that travels back and forth from one end to the other exactly like the swimming-pool wave.

Spring manufacturers have taken slow-motion movies of automotive valve-spring surge. These pictures show a very violent surging, with the spring actually jumping out of contact with the end plates. Figure 10–5 is a photograph of a failure caused by such surging.

When helical springs are used in applications requiring a rapid reciprocating motion, the designer must be certain that the physical dimensions of the spring are not such as to create a natural vibratory frequency close to the frequency of the applied force; otherwise, resonance may occur, resulting in damaging stresses, since the internal damping of spring materials is quite low.

The governing equation for the translational vibration of a spring is the wave equation

$$\frac{\partial^2 u}{\partial x^2} = \frac{W}{kg l^2} \frac{\partial^2 u}{\partial t^2} \quad (10-24)$$

where k = spring rate

g = acceleration due to gravity

l = length of spring


W = weight of spring

x = coordinate along length of spring

u = motion of any particle at distance x

Figure 10-5

Valve-spring failure in an overrevved engine. Fracture is along the 45° line of maximum principal stress associated with pure torsional loading.



The solution to this equation is harmonic and depends on the given physical properties as well as the end conditions of the spring. The harmonic, *natural*, frequencies for a spring placed between two flat and parallel plates, in radians per second, are

$$\omega = m\pi\sqrt{\frac{kg}{W}} \quad m = 1, 2, 3, \dots$$

where the fundamental frequency is found for $m = 1$, the second harmonic for $m = 2$, and so on. We are usually interested in the frequency in cycles per second; since $\omega = 2\pi f$, we have, for the fundamental frequency in hertz,

$$f = \frac{1}{2}\sqrt{\frac{kg}{W}} \quad (10-25)$$

assuming the spring ends are always in contact with the plates.

Wolford and Smith⁹ show that the frequency is

$$f = \frac{1}{4}\sqrt{\frac{kg}{W}} \quad (10-26)$$

where the spring has one end against a flat plate and the other end free. They also point out that Eq. (10-25) applies when one end is against a flat plate and the other end is driven with a sine-wave motion.

The weight of the active part of a helical spring is

$$W = AL\gamma = \frac{\pi d^2}{4}(\pi DN_a)(\gamma) = \frac{\pi^2 d^2 DN_a \gamma}{4} \quad (10-27)$$

where γ is the specific weight.

⁹J. C. Wolford and G. M. Smith, "Surge of Helical Springs," *Mech. Eng. News*, vol. 13, no. 1, February 1976, pp. 4–9.

The fundamental critical frequency should be greater than 15 to 20 times the frequency of the force or motion of the spring in order to avoid resonance with the harmonics. If the frequency is not high enough, the spring should be redesigned to increase k or decrease W .

10-9 Fatigue Loading of Helical Compression Springs

Springs are almost always subject to fatigue loading. In many instances the number of cycles of required life may be small, say, several thousand for a padlock spring or a toggle-switch spring. But the valve spring of an automotive engine must sustain millions of cycles of operation without failure; so it must be designed for infinite life.

To improve the fatigue strength of dynamically loaded springs, shot peening can be used. It can increase the torsional fatigue strength by 20 percent or more. Shot size is about $\frac{1}{64}$ in, so spring coil wire diameter and pitch must allow for complete coverage of the spring surface.

The best data on the torsional endurance limits of spring steels are those reported by Zimmerli.¹⁰ He discovered the surprising fact that size, material, and tensile strength have no effect on the endurance limits (infinite life only) of spring steels in sizes under $\frac{3}{8}$ in (10 mm). We have already observed that endurance limits tend to level out at high tensile strengths (Fig. 6-17), p. 275, but the reason for this is not clear. Zimmerli suggests that it may be because the original surfaces are alike or because plastic flow during testing makes them the same. Unpeened springs were tested from a minimum torsional stress of 20 kpsi to a maximum of 90 kpsi and peened springs in the range 20 kpsi to 135 kpsi. The corresponding endurance strength components for infinite life were found to be

Unpeened:

$$S_{sa} = 35 \text{ kpsi (241 MPa)} \quad S_{sm} = 55 \text{ kpsi (379 MPa)} \quad (10-28)$$

Peened:

$$S_{sa} = 57.5 \text{ kpsi (398 MPa)} \quad S_{sm} = 77.5 \text{ kpsi (534 MPa)} \quad (10-29)$$

For example, given an unpeened spring with $S_{su} = 211.5$ kpsi, the Gerber ordinate intercept for shear, from Eq. (6-42), p. 298, is

$$S_{se} = \frac{S_{sa}}{1 - \left(\frac{S_{sm}}{S_{su}}\right)^2} = \frac{35}{1 - \left(\frac{55}{211.5}\right)^2} = 37.5 \text{ kpsi}$$

For the Goodman failure criterion, the intercept would be 47.3 kpsi. Each possible wire size would change these numbers, since S_{su} would change.

An extended study¹¹ of available literature regarding torsional fatigue found that for polished, notch-free, cylindrical specimens subjected to torsional shear stress, the maximum alternating stress that may be imposed without causing failure is *constant* and independent of the mean stress in the cycle provided that the maximum stress range does not equal or exceed the torsional yield strength of the metal. With notches and abrupt section changes this consistency is not found. Springs are free of notches and surfaces are often very smooth. This failure criterion is known as the *Sines failure criterion* in torsional fatigue.

¹⁰F. P. Zimmerli, "Human Failures in Spring Applications," *The Mainspring*, no. 17, Associated Spring Corporation, Bristol, Conn., August–September 1957.

¹¹Oscar J. Horger (ed.), *Metals Engineering: Design Handbook*, McGraw-Hill, New York, 1953, p. 84.

In constructing certain failure criteria on the designers' torsional fatigue diagram, the torsional modulus of rupture S_{su} is needed. We shall continue to employ Eq. (6–54), p. 309, which is

$$S_{su} = 0.67S_{ut} \quad (10-30)$$

In the case of shafts and many other machine members, fatigue loading in the form of completely reversed stresses is quite ordinary. Helical springs, on the other hand, are never used as both compression and extension springs. In fact, they are usually assembled with a preload so that the working load is additional. Thus the stress-time diagram of Fig. 6–23*d*, p. 293, expresses the usual condition for helical springs. The worst condition, then, would occur when there is no preload, that is, when $\tau_{\min} = 0$.

Now, we define

$$F_a = \frac{F_{\max} - F_{\min}}{2} \quad (10-31a)$$

$$F_m = \frac{F_{\max} + F_{\min}}{2} \quad (10-31b)$$

where the subscripts have the same meaning as those of Fig. 7–23*d* when applied to the axial spring force F . Then the shear stress amplitude is

$$\tau_a = K_B \frac{8F_a D}{\pi d^3} \quad (10-32)$$

where K_B is the Bergsträsser factor, obtained from Eq. (10–6), and corrects for both direct shear and the curvature effect. As noted in Sec. 10–2, the Wahl factor K_W can be used instead, if desired.

The midrange shear stress is given by the equation

$$\tau_m = K_B \frac{8F_m D}{\pi d^3} \quad (10-33)$$

EXAMPLE 10-4

An as-wound helical compression spring, made of music wire, has a wire size of 0.092 in, an outside coil diameter of $\frac{9}{16}$ in, a free length of $4\frac{3}{8}$ in, 21 active coils, and both ends squared and ground. The spring is unpeened. This spring is to be assembled with a preload of 5 lbf and will operate with a maximum load of 35 lbf during use.

- Estimate the factor of safety guarding against fatigue failure using a torsional Gerber fatigue failure criterion with Zimmerli data.
- Repeat part (a) using the Sines torsional fatigue criterion (steady stress component has no effect), with Zimmerli data.
- Repeat using a torsional Goodman failure criterion with Zimmerli data.
- Estimate the critical frequency of the spring.

Solution

The mean coil diameter is $D = 0.5625 - 0.092 = 0.4705$ in. The spring index is $C = D/d = 0.4705/0.092 = 5.11$. Then

$$K_B = \frac{4C + 2}{4C - 3} = \frac{4(5.11) + 2}{4(5.11) - 3} = 1.287$$

From Eqs. (10–31),

$$F_a = \frac{35 - 5}{2} = 15 \text{ lbf} \quad F_m = \frac{35 + 5}{2} = 20 \text{ lbf}$$

The alternating shear-stress component is found from Eq. (10–32) to be

$$\tau_a = K_B \frac{8F_a D}{\pi d^3} = (1.287) \frac{8(15)0.4705}{\pi(0.092)^3} (10^{-3}) = 29.7 \text{ kpsi}$$

Equation (10–33) gives the midrange shear-stress component

$$\tau_m = K_B \frac{8F_m D}{\pi d^3} = 1.287 \frac{8(20)0.4705}{\pi(0.092)^3} (10^{-3}) = 39.6 \text{ kpsi}$$

From Table 10–4 we find $A = 201 \text{ kpsi} \cdot \text{in}^m$ and $m = 0.145$. The ultimate tensile strength is estimated from Eq. (10–14) as

$$S_{ut} = \frac{A}{d^m} = \frac{201}{0.092^{0.145}} = 284.1 \text{ kpsi}$$

Also the shearing ultimate strength is estimated from

$$S_{su} = 0.67S_{ut} = 0.67(284.1) = 190.3 \text{ kpsi}$$

The load-line slope $r = \tau_a/\tau_m = 29.7/39.6 = 0.75$.

(a) The Gerber ordinate intercept for the Zimmerli data, Eq. (10–28), is

$$S_{se} = \frac{S_{sa}}{1 - (S_{sm}/S_{su})^2} = \frac{35}{1 - (55/190.3)^2} = 38.2 \text{ kpsi}$$

The amplitude component of strength S_{sa} , from Table 6–7, p. 299, is

$$\begin{aligned} S_{sa} &= \frac{r^2 S_{su}^2}{2S_{se}} \left[-1 + \sqrt{1 + \left(\frac{2S_{se}}{rS_{su}} \right)^2} \right] \\ &= \frac{0.75^2 190.3^2}{2(38.2)} \left\{ -1 + \sqrt{1 + \left[\frac{2(38.2)}{0.75(190.3)} \right]^2} \right\} = 35.8 \text{ kpsi} \end{aligned}$$

and the fatigue factor of safety n_f is given by

Answer
$$n_f = \frac{S_{sa}}{\tau_a} = \frac{35.8}{29.7} = 1.21$$

(b) The Sines failure criterion ignores S_{sm} so that, for the Zimmerli data with $S_{sa} = 35 \text{ kpsi}$,

Answer
$$n_f = \frac{S_{sa}}{\tau_a} = \frac{35}{29.7} = 1.18$$

(c) The ordinate intercept S_{se} for the Goodman failure criterion with the Zimmerli data is

$$S_{se} = \frac{S_{sa}}{1 - (S_{sm}/S_{su})} = \frac{35}{1 - (55/190.3)} = 49.2 \text{ kpsi}$$

The amplitude component of the strength S_{sa} for the Goodman criterion, from Table 6–6, p. 299, is

$$S_{sa} = \frac{r S_{se} S_{su}}{r S_{su} + S_{se}} = \frac{0.75(49.2)190.3}{0.75(190.3) + 49.2} = 36.6 \text{ kpsi}$$

The fatigue factor of safety is given by

Answer
$$n_f = \frac{S_{sa}}{\tau_a} = \frac{36.6}{29.7} = 1.23$$

(d) Using Eq. (10–9) and Table 10–5, we estimate the spring rate as

$$k = \frac{d^4 G}{8D^3 N_a} = \frac{0.092^4 [11.75(10^6)]}{8(0.4705)^3 21} = 48.1 \text{ lbf/in}$$

From Eq. (10–27) we estimate the spring weight as

$$W = \frac{\pi^2 (0.092^2) 0.4705 (21) 0.284}{4} = 0.0586 \text{ lbf}$$

and from Eq. (10–25) the frequency of the fundamental wave is

Answer
$$f_n = \frac{1}{2} \left[\frac{48.1(386)}{0.0586} \right]^{1/2} = 281 \text{ Hz}$$

If the operating or exciting frequency is more than $281/20 = 14.1$ Hz, the spring may have to be redesigned.

We used three approaches to estimate the fatigue factor of safety in Ex. 10–5. The results, in order of smallest to largest, were 1.18 (Sines), 1.21 (Gerber), and 1.23 (Goodman). Although the results were very close to one another, using the Zimmerli data as we have, the Sines criterion will always be the most conservative and the Goodman the least. If we perform a fatigue analysis using strength properties as was done in Chap. 6, different results would be obtained, but here the Goodman criterion would be more conservative than the Gerber criterion. Be prepared to see designers or design software using any one of these techniques. This is why we cover them. Which criterion is correct? Remember, we are performing *estimates* and only testing will reveal the truth—*statistically*.

10–10 Helical Compression Spring Design for Fatigue Loading

Let us begin with the statement of a problem. In order to compare a static spring to a dynamic spring, we shall design the spring in Ex. 10–2 for dynamic service.

EXAMPLE 10–5

A music wire helical compression spring with infinite life is needed to resist a dynamic load that varies from 5 to 20 lbf at 5 Hz while the end deflection varies from $\frac{1}{2}$ to 2 in. Because of assembly considerations, the solid height cannot exceed 1 in and the free length cannot be more than 4 in. The springmaker has the following wire sizes in stock: 0.069, 0.071, 0.080, 0.085, 0.090, 0.095, 0.105, and 0.112 in.

Solution The a priori decisions are:

- Material and condition: for music wire, $A = 201 \text{ kpsi} \cdot \text{in}^m$, $m = 0.145$, $G = 11.75(10^6) \text{ psi}$; relative cost is 2.6
- Surface treatment: unpeened
- End treatment: squared and ground
- Robust linearity: $\xi = 0.15$
- Set: use in as-wound condition
- Fatigue-safe: $n_f = 1.5$ using the Sines-Zimmerli fatigue-failure criterion
- Function: $F_{\min} = 5 \text{ lbf}$, $F_{\max} = 20 \text{ lbf}$, $y_{\min} = 0.5 \text{ in}$, $y_{\max} = 2 \text{ in}$, spring operates free (no rod or hole)
- Decision variable: wire size d

The figure of merit will be the volume of wire to wind the spring, Eq. (10–22). The design strategy will be to set wire size d , build a table, inspect the table, and choose the satisfactory spring with the highest figure of merit.

Solution Set $d = 0.112 \text{ in}$. Then

$$F_a = \frac{20 - 5}{2} = 7.5 \text{ lbf} \quad F_m = \frac{20 + 5}{2} = 12.5 \text{ lbf}$$

$$k = \frac{F_{\max}}{y_{\max}} = \frac{20}{2} = 10 \text{ lbf/in}$$

$$S_{ut} = \frac{201}{0.112^{0.145}} = 276.1 \text{ kpsi}$$

$$S_{su} = 0.67(276.1) = 185.0 \text{ kpsi}$$

$$S_{sy} = 0.45(276.1) = 124.2 \text{ kpsi}$$

From Eq. (10–28), with the Sines criterion, $S_{se} = S_{sa} = 35 \text{ kpsi}$. Equation (10–23) can be used to determine C with S_{se} , n_f , and F_a in place of S_{sy} , n_s , and $(1 + \xi)F_{\max}$, respectively. Thus,

$$\alpha = \frac{S_{se}}{n_f} = \frac{35\,000}{1.5} = 23\,333 \text{ psi}$$

$$\beta = \frac{8F_a}{\pi d^2} = \frac{8(7.5)}{\pi(0.112^2)} = 1522.5 \text{ psi}$$

$$C = \frac{2(23\,333) - 1522.5}{4(1522.5)} + \sqrt{\left[\frac{2(23\,333) - 1522.5}{4(1522.5)} \right]^2 - \frac{3(23\,333)}{4(1522.5)}} = 14.005$$

$$D = Cd = 14.005(0.112) = 1.569 \text{ in}$$

$$F_s = (1 + \xi)F_{\max} = (1 + 0.15)20 = 23 \text{ lbf}$$

$$N_a = \frac{d^4 G}{8D^3 k} = \frac{0.112^4 (11.75)(10^6)}{8(1.569)^3 10} = 5.98 \text{ turns}$$

$$N_t = N_a + 2 = 5.98 + 2 = 7.98 \text{ turns}$$

$$L_s = dN_t = 0.112(7.98) = 0.894 \text{ in}$$

$$L_0 = L_s + \frac{F_s}{k} = 0.894 + \frac{23}{10} = 3.194 \text{ in}$$

$$\text{ID} = 1.569 - 0.112 = 1.457 \text{ in}$$

$$\text{OD} = 1.569 + 0.112 = 1.681 \text{ in}$$

$$y_s = L_0 - L_s = 3.194 - 0.894 = 2.30 \text{ in}$$

$$(L_0)_{\text{cr}} < \frac{2.63D}{\alpha} = 2.63 \frac{(1.569)}{0.5} = 8.253 \text{ in}$$

$$K_B = \frac{4(14.005) + 2}{4(14.005) - 3} = 1.094$$

$$W = \frac{\pi^2 d^2 D N_a \gamma}{4} = \frac{\pi^2 0.112^2 (1.569) 5.98 (0.284)}{4} = 0.0825 \text{ lbf}$$

$$f_n = 0.5 \sqrt{\frac{386k}{W}} = 0.5 \sqrt{\frac{386(10)}{0.0825}} = 108 \text{ Hz}$$

$$\tau_a = K_B \frac{8F_a D}{\pi d^3} = 1.094 \frac{8(7.5)1.569}{\pi 0.112^3} = 23\,334 \text{ psi}$$

$$\tau_m = \tau_a \frac{F_m}{F_a} = 23\,334 \frac{12.5}{7.5} = 38\,890 \text{ psi}$$

$$\tau_s = \tau_a \frac{F_s}{F_a} = 23\,334 \frac{23}{7.5} = 71\,560 \text{ psi}$$

$$n_f = \frac{S_{sa}}{\tau_a} = \frac{35\,000}{23\,334} = 1.5$$

$$n_s = \frac{S_{sy}}{\tau_s} = \frac{124\,200}{71\,560} = 1.74$$

$$\begin{aligned} \text{fom} &= -(\text{relative material cost})\pi^2 d^2 N_t D / 4 \\ &= -2.6\pi^2 (0.112^2)(7.98)1.569 / 4 = -1.01 \end{aligned}$$

Inspection of the results shows that all conditions are satisfied except for $4 \leq C \leq 12$. Repeat the process using the other available wire sizes and develop the following

table:

d:	0.069	0.071	0.080	0.085	0.090	0.095	0.105	0.112
D	0.297	0.332	0.512	0.632	0.767	0.919	1.274	1.569
ID	0.228	0.261	0.432	0.547	0.677	0.824	1.169	1.457
OD	0.366	0.403	0.592	0.717	0.857	1.014	1.379	1.681
C	4.33	4.67	6.40	7.44	8.53	9.67	12.14	14.00
N_a	127.2	102.4	44.8	30.5	21.3	15.4	8.63	6.0
L_s	8.916	7.414	3.740	2.750	2.100	1.655	1.116	0.895
L_0	11.216	9.714	6.040	5.050	4.400	3.955	3.416	3.195
$(L_0)_{cr}$	1.562	1.744	2.964	3.325	4.036	4.833	6.703	8.250
n_f	1.50	1.50	1.50	1.50	1.50	1.50	1.50	1.50
n_s	1.86	1.85	1.82	1.81	1.79	1.78	1.75	1.74
f_n	87.5	89.7	96.9	99.7	101.9	103.8	106.6	108
fom	-1.17	-1.12	-0.983	-0.948	-0.930	-0.927	-0.958	-1.01

The problem-specific inequality constraints are

$$L_s \leq 1 \text{ in}$$

$$L_0 \leq 4 \text{ in}$$

$$f_n \geq 5(20) = 100 \text{ Hz}$$

The general constraints are

$$3 \leq N_a \leq 15$$

$$4 \leq C \leq 12$$

$$(L_0)_{cr} > L_0$$

We see that none of the diameters satisfy the given constraints. The 0.105-in-diameter wire is the closest to satisfying all requirements. The value of $C = 12.14$ is not a serious deviation and can be tolerated. However, the tight constraint on L_s needs to be addressed. If the assembly conditions can be relaxed to accept a solid height of 1.116 in, we have a solution. If not, the only other possibility is to use the 0.112-in diameter and accept a value $C = 14$, individually package the springs, and possibly reconsider supporting the spring in service.

10–11 Extension Springs

Extension springs differ from compression springs in that they carry tensile loading, they require some means of transferring the load from the support to the body of the spring, and the spring body is wound with an initial tension. The load transfer can be done with a threaded plug or a swivel hook; both of these add to the cost of the finished product, and so one of the methods shown in Fig. 10–6 is usually employed.

Stresses in the body of the extension spring are handled the same as compression springs. In designing a spring with a hook end, bending and torsion in the hook

Figure 10-6

Types of ends used on extension springs. (Courtesy of Associated Spring.)

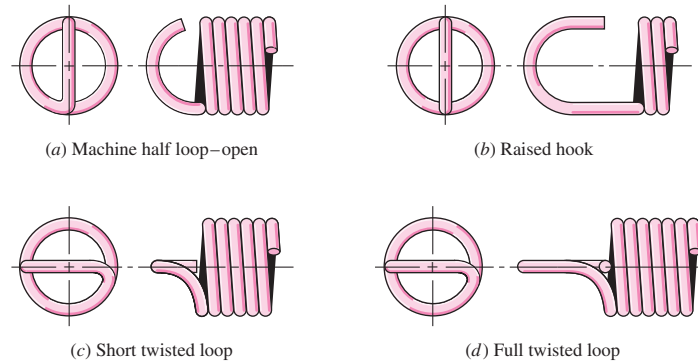
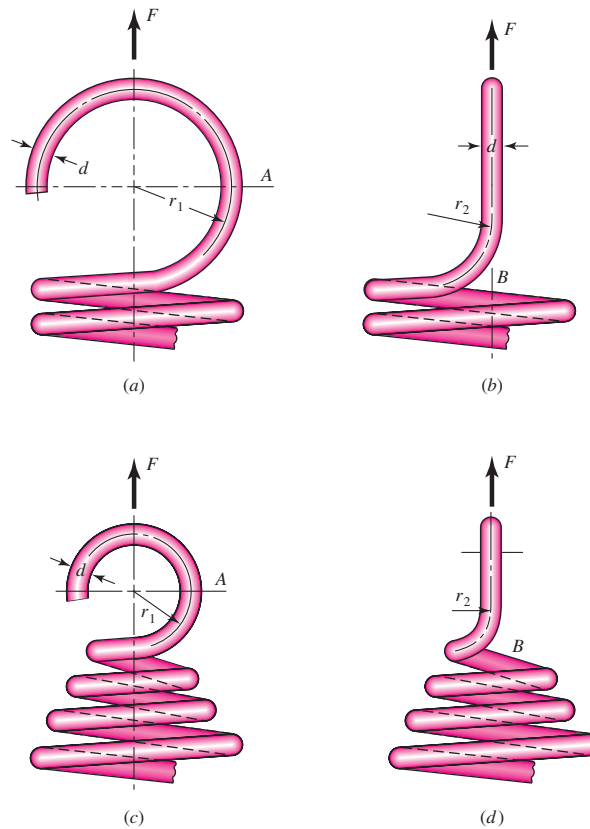


Figure 10-7

Ends for extension springs. (a) Usual design; stress at *A* is due to combined axial force and bending moment. (b) Side view of part *a*; stress is mostly torsion at *B*. (c) Improved design; stress at *A* is due to combined axial force and bending moment. (d) Side view of part *c*; stress at *B* is mostly torsion.



Note: Radius *r*₁ is in the plane of the end coil for curved beam bending stress. Radius *r*₂ is at a right angle to the end coil for torsional shear stress.

must be included in the analysis. In Fig. 10-7*a* and *b* a commonly used method of designing the end is shown. The maximum tensile stress at *A*, due to bending and axial loading, is given by

$$\sigma_A = F \left[(K)_A \frac{16D}{\pi d^3} + \frac{4}{\pi d^2} \right] \quad (10-34)$$

where $(K)_A$ is a bending stress correction factor for curvature, given by

$$(K)_A = \frac{4C_1^2 - C_1 - 1}{4C_1(C_1 - 1)} \quad C_1 = \frac{2r_1}{d} \quad (10-35)$$

The maximum torsional stress at point B is given by

$$\tau_B = (K)_B \frac{8FD}{\pi d^3} \quad (10-36)$$

where the stress correction factor for curvature, $(K)_B$, is

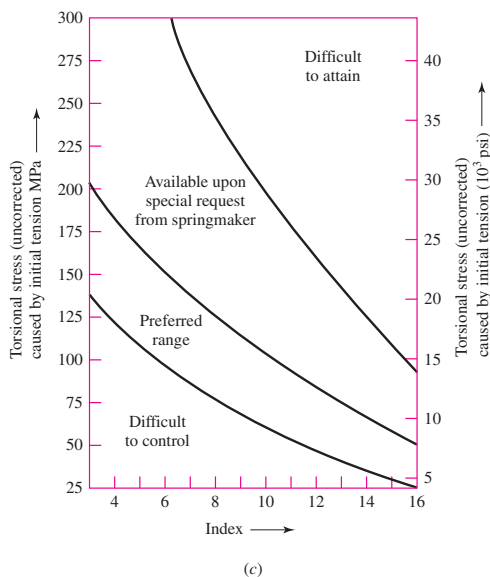
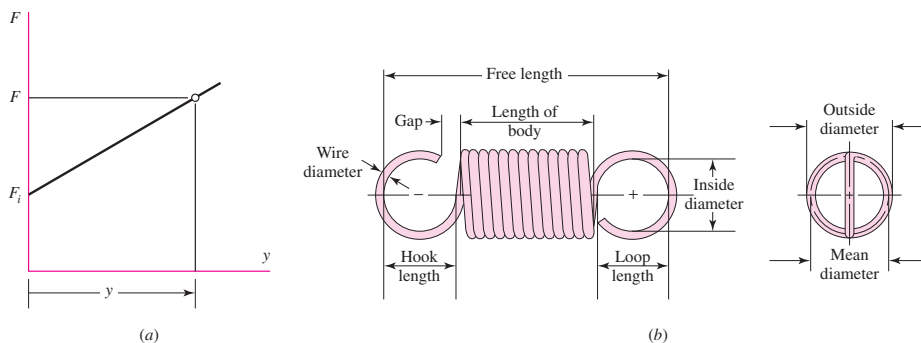
$$(K)_B = \frac{4C_2 - 1}{4C_2 - 4} \quad C_2 = \frac{2r_2}{d} \quad (10-37)$$

Figure 10-7c and d show an improved design due to a reduced coil diameter.

When extension springs are made with coils in contact with one another, they are said to be *close-wound*. Spring manufacturers prefer some initial tension in close-wound springs in order to hold the free length more accurately. The corresponding load-deflection curve is shown in Fig. 10-8a, where y is the extension beyond the free length

Figure 10-8

(a) Geometry of the force F and extension y curve of an extension spring; (b) geometry of the extension spring; and (c) torsional stresses due to initial tension as a function of spring index C in helical extension springs.



L_0 and F_i is the initial tension in the spring that must be exceeded before the spring deflects. The load-deflection relation is then

$$F = F_i + ky \tag{10-38}$$

where k is the spring rate. The free length L_0 of a spring measured inside the end loops or hooks as shown in Fig. 10-8*b* can be expressed as

$$L_0 = 2(D - d) + (N_b + 1)d = (2C - 1 + N_b)d \tag{10-39}$$

where D is the mean coil diameter, N_b is the number of body coils, and C is the spring index. With ordinary twisted end loops as shown in Fig. 10-8*b*, to account for the deflection of the loops in determining the spring rate k , the equivalent number of active helical turns N_a for use in Eq. (10-9) is

$$N_a = N_b + \frac{G}{E} \tag{10-40}$$

where G and E are the shear and tensile moduli of elasticity, respectively (see Prob. 10-31).

The initial tension in an extension spring is created in the winding process by twisting the wire as it is wound onto the mandrel. When the spring is completed and removed from the mandrel, the initial tension is locked in because the spring cannot get any shorter. The amount of initial tension that a springmaker can routinely incorporate is as shown in Fig. 10-8*c*. The preferred range can be expressed in terms of the *uncorrected torsional stress* τ_i as

$$\tau_i = \frac{33\,500}{\exp(0.105C)} \pm 1000 \left(4 - \frac{C - 3}{6.5} \right) \text{ psi} \tag{10-41}$$

where C is the spring index.

Guidelines for the maximum allowable corrected stresses for static applications of extension springs are given in Table 10-7.

Table 10-7

Maximum Allowable Stresses (K_W or K_B corrected) for Helical Extension Springs in Static Applications

Source: From *Design Handbook*, 1987, p. 52. Courtesy of Associated Spring.

Materials	Percent of Tensile Strength		
	In Torsion Body	In Torsion End	In Bending End
Patented, cold-drawn or hardened and tempered carbon and low-alloy steels	45–50	40	75
Austenitic stainless steel and nonferrous alloys	35	30	55

This information is based on the following conditions: set not removed and low temperature heat treatment applied. For springs that require high initial tension, use the same percent of tensile strength as for end.

EXAMPLE 10–6

A hard-drawn steel wire extension spring has a wire diameter of 0.035 in, an outside coil diameter of 0.248 in, hook radii of $r_1 = 0.106$ in and $r_2 = 0.089$ in, and an initial tension of 1.19 lbf. The number of body turns is 12.17. From the given information:

- Determine the physical parameters of the spring.
- Check the initial preload stress conditions.
- Find the factors of safety under a static 5.25-lbf load.

Solution

$$(a) \quad D = \text{OD} - d = 0.248 - 0.035 = 0.213 \text{ in}$$

$$C = \frac{D}{d} = \frac{0.213}{0.035} = 6.086$$

$$K_B = \frac{4C + 2}{4C - 3} = 1.234$$

$$\text{Eq. (10-40):} \quad N_a = N_b + G/E = 12.17 + 11.5/28.7 = 12.57 \text{ turns}$$

$$\text{Eq. (10-9):} \quad k = \frac{d^4 G}{8D^3 N_a} = \frac{0.035^4 (11.5) 10^6}{8(0.213^3) 12.57} = 17.76 \text{ lbf/in}$$

$$\text{Eq. (10-39):} \quad L_0 = (2C - 1 + N_b)d = [2(6.086) - 1 + 12.17] 0.035 = 0.817 \text{ in}$$

The deflection under the service load is

$$y_{\max} = \frac{F_{\max} - F_i}{k} = \frac{5.25 - 1.19}{17.76} = 0.229 \text{ in}$$

where the spring length becomes $L = L_0 + y = 0.817 + 0.229 = 1.046$ in.

(b) The uncorrected initial stress is given by Eq. (10-3) without the correction factor. That is,

$$(\tau_i)_{\text{uncorr}} = \frac{8F_i D}{\pi d^3} = \frac{8(1.19)0.213(10^{-3})}{\pi(0.035^3)} = 15.1 \text{ kpsi}$$

The preferred range is given by Eq. (10-41) and for this case is

$$\begin{aligned} (\tau_i)_{\text{pref}} &= \frac{33\,500}{\exp(0.105C)} \pm 1000 \left(4 - \frac{C-3}{6.5} \right) \\ &= \frac{33\,500}{\exp[0.105(6.086)]} \pm 1000 \left(4 - \frac{6.086-3}{6.5} \right) \\ &= 17\,681 \pm 3525 = 21.2, 14.2 \text{ kpsi} \end{aligned}$$

Answer

Thus, the initial tension of 15.1 kpsi is in the preferred range.

(c) For hard-drawn wire, Table 10-4 gives $m = 0.190$ and $A = 140 \text{ kpsi} \cdot \text{in}^m$. From Eq. (10-14)

$$S_{ut} = \frac{A}{d^m} = \frac{140}{0.035^{0.190}} = 264.7 \text{ kpsi}$$

For torsional shear in the main body of the spring, from Table 10-7,

$$S_{sy} = 0.45S_{ut} = 0.45(264.7) = 119.1 \text{ kpsi}$$

The shear stress under the service load is

$$\tau_{\max} = \frac{8K_B F_{\max} D}{\pi d^3} = \frac{8(1.234)5.25(0.213)}{\pi(0.035^3)}(10^{-3}) = 82.0 \text{ kpsi}$$

Thus, the factor of safety is

Answer
$$n = \frac{S_{sy}}{\tau_{\max}} = \frac{119.1}{82.0} = 1.45$$

For the end-hook bending at A,

$$C_1 = 2r_1/d = 2(0.106)/0.035 = 6.057$$

From Eq. (10–35)

$$(K)_A = \frac{4C_1^2 - C_1 - 1}{4C_1(C_1 - 1)} = \frac{4(6.057^2) - 6.057 - 1}{4(6.057)(6.057 - 1)} = 1.14$$

From Eq. (10–34)

$$\begin{aligned} \sigma_A &= F_{\max} \left[(K)_A \frac{16D}{\pi d^3} + \frac{4}{\pi d^2} \right] \\ &= 5.25 \left[1.14 \frac{16(0.213)}{\pi(0.035^3)} + \frac{4}{\pi(0.035^2)} \right] (10^{-3}) = 156.9 \text{ kpsi} \end{aligned}$$

The yield strength, from Table 10–7, is given by

$$S_y = 0.75S_{ut} = 0.75(264.7) = 198.5 \text{ kpsi}$$

The factor of safety for end-hook bending at A is then

Answer
$$n_A = \frac{S_y}{\sigma_A} = \frac{198.5}{156.9} = 1.27$$

For the end-hook in torsion at B, from Eq. (10–37)

$$C_2 = 2r_2/d = 2(0.089)/0.035 = 5.086$$

$$(K)_B = \frac{4C_2 - 1}{4C_2 - 4} = \frac{4(5.086) - 1}{4(5.086) - 4} = 1.18$$

and the corresponding stress, given by Eq. (10–36), is

$$\tau_B = (K)_B \frac{8F_{\max} D}{\pi d^3} = 1.18 \frac{8(5.25)0.213}{\pi(0.035^3)}(10^{-3}) = 78.4 \text{ kpsi}$$

Using Table 10–7 for yield strength, the factor of safety for end-hook torsion at B is

Answer
$$n_B = \frac{(S_{sy})_B}{\tau_B} = \frac{0.4(264.7)}{78.4} = 1.35$$

Yield due to bending of the end hook will occur first.

Next, let us consider a fatigue problem.

EXAMPLE 10-7

The helical coil extension spring of Ex. 10-6 is subjected to a dynamic loading from 1.5 to 5 lbf. Estimate the factors of safety using the Gerber failure criterion for (a) coil fatigue, (b) coil yielding, (c) end-hook bending fatigue at point *A* of Fig. 10-7*a*, and (d) end-hook torsional fatigue at point *B* of Fig. 10-7*b*.

Solution

A number of quantities are the same as in Ex. 10-6: $d = 0.035$ in, $S_{ut} = 264.7$ kpsi, $D = 0.213$ in, $r_1 = 0.106$ in, $C = 6.086$, $K_B = 1.234$, $(K)_A = 1.14$, $(K)_B = 1.18$, $N_b = 12.17$ turns, $L_0 = 0.817$ in, $k = 17.76$ lbf/in, $F_i = 1.19$ lbf, and $(\tau_c)_{\text{uncorr}} = 15.1$ kpsi. Then

$$F_a = (F_{\max} - F_{\min})/2 = (5 - 1.5)/2 = 1.75 \text{ lbf}$$

$$F_m = (F_{\max} + F_{\min})/2 = (5 + 1.5)/2 = 3.25 \text{ lbf}$$

The strengths from Ex. 10-6 include $S_{ut} = 264.7$ kpsi, $S_y = 198.5$ kpsi, and $S_{sy} = 119.1$ kpsi. The ultimate shear strength is estimated from Eq. (10-30) as

$$S_{su} = 0.67S_{ut} = 0.67(264.7) = 177.3 \text{ kpsi}$$

(a) Body-coil fatigue:

$$\tau_a = \frac{8K_B F_a D}{\pi d^3} = \frac{8(1.234)1.75(0.213)}{\pi(0.035^3)}(10^{-3}) = 27.3 \text{ kpsi}$$

$$\tau_m = \frac{F_m}{F_a} \tau_a = \frac{3.25}{1.75} 27.3 = 50.7 \text{ kpsi}$$

Using the Zimmerli data of Eq. (10-28) gives

$$S_{se} = \frac{S_{sa}}{1 - \left(\frac{S_{sm}}{S_{su}}\right)^2} = \frac{35}{1 - \left(\frac{55}{177.3}\right)^2} = 38.7 \text{ kpsi}$$

From Table 6-7, p. 299, the Gerber fatigue criterion for shear is

$$\begin{aligned} (n_f)_{\text{body}} &= \frac{1}{2} \left(\frac{S_{su}}{\tau_m}\right)^2 \frac{\tau_a}{S_{se}} \left[-1 + \sqrt{1 + \left(2 \frac{\tau_m}{S_{su}} \frac{S_{se}}{\tau_a}\right)^2} \right] \\ &= \frac{1}{2} \left(\frac{177.3}{50.7}\right)^2 \frac{27.3}{38.7} \left[-1 + \sqrt{1 + \left(2 \frac{50.7}{177.3} \frac{38.7}{27.3}\right)^2} \right] = 1.24 \end{aligned}$$

(b) The load-line for the coil body begins at $S_{sm} = \tau_i$ and has a slope $r = \tau_a/(\tau_m - \tau_i)$. It can be shown that the intersection with the yield line is given by $(S_{sa})_y = [r/(r+1)](S_{sy} - \tau_i)$. Consequently, $\tau_i = (F_i/F_a)\tau_a = (1.19/1.75)27.3 = 18.6$ kpsi, $r = 27.3/(50.7 - 18.6) = 0.850$, and

$$(S_{sa})_y = \frac{0.850}{0.850 + 1} (119.1 - 18.6) = 46.2 \text{ kpsi}$$

Thus,

$$(n_y)_{\text{body}} = \frac{(S_{sa})_y}{\tau_a} = \frac{46.2}{27.3} = 1.69$$

Answer

(c) End-hook bending fatigue: using Eqs. (10–34) and (10–35) gives

$$\begin{aligned}\sigma_a &= F_a \left[(K)_A \frac{16D}{\pi d^3} + \frac{4}{\pi d^2} \right] \\ &= 1.75 \left[1.14 \frac{16(0.213)}{\pi(0.035^3)} + \frac{4}{\pi(0.035^2)} \right] (10^{-3}) = 52.3 \text{ kpsi} \\ \sigma_m &= \frac{F_m}{F_a} \sigma_a = \frac{3.25}{1.75} 52.3 = 97.1 \text{ kpsi}\end{aligned}$$

To estimate the tensile endurance limit using the distortion-energy theory,

$$S_e = S_{se}/0.577 = 38.7/0.577 = 67.1 \text{ kpsi}$$

Using the Gerber criterion for tension gives

Answer

$$\begin{aligned}(n_f)_A &= \frac{1}{2} \left(\frac{S_{ut}}{\sigma_m} \right)^2 \frac{\sigma_a}{S_e} \left[-1 + \sqrt{1 + \left(2 \frac{\sigma_m}{S_{ut}} \frac{S_e}{\sigma_a} \right)^2} \right] \\ &= \frac{1}{2} \left(\frac{264.7}{97.1} \right)^2 \frac{52.3}{67.1} \left[-1 + \sqrt{1 + \left(2 \frac{97.1}{264.7} \frac{67.1}{52.3} \right)^2} \right] = 1.08\end{aligned}$$

(d) End-hook torsional fatigue: from Eq. (10–36)

$$\begin{aligned}(\tau_a)_B &= (K)_B \frac{8F_a D}{\pi d^3} = 1.18 \frac{8(1.75)0.213}{\pi(0.035^3)} (10^{-3}) = 26.1 \text{ kpsi} \\ (\tau_m)_B &= \frac{F_m}{F_a} (\tau_a)_B = \frac{3.25}{1.75} 26.1 = 48.5 \text{ kpsi}\end{aligned}$$

Then, again using the Gerber criterion, we obtain

Answer

$$\begin{aligned}(n_f)_B &= \frac{1}{2} \left(\frac{S_{su}}{\tau_m} \right)^2 \frac{\tau_a}{S_{se}} \left[-1 + \sqrt{1 + \left(2 \frac{\tau_m}{S_{su}} \frac{S_{se}}{\tau_a} \right)^2} \right] \\ &= \frac{1}{2} \left(\frac{177.3}{48.5} \right)^2 \frac{26.1}{38.7} \left[-1 + \sqrt{1 + \left(2 \frac{48.5}{177.3} \frac{38.7}{26.1} \right)^2} \right] = 1.30\end{aligned}$$

The analyses in Exs. 10–6 and 10–7 show how extension springs differ from compression springs. The end hooks are usually the weakest part, with bending usually controlling. We should also appreciate that a fatigue failure separates the extension spring under load. Flying fragments, lost load, and machine shutdown are threats to personal safety as well as machine function. For these reasons higher design factors are used in extension-spring design than in the design of compression springs.

In Ex. 10–7 we estimated the endurance limit for the hook in bending using the Zimmerli data, which are based on torsion in compression springs and the distortion theory. An alternative method is to use Table 10–8, which is based on a stress-ratio of $R = \tau_{\min}/\tau_{\max} = 0$. For this case, $\tau_a = \tau_m = \tau_{\max}/2$. Label the strength values of Table 10–8

Table 10–8

Maximum Allowable
Stresses for ASTM
A228 and Type 302
Stainless Steel Helical
Extension Springs in
Cyclic Applications

Source: From *Design
Handbook*, 1987, p. 52.
Courtesy of Associated
Spring.

Number of Cycles	Percent of Tensile Strength		
	In Torsion Body	End	In Bending End
10^5	36	34	51
10^6	33	30	47
10^7	30	28	45

This information is based on the following conditions: not shot-peened, no surging and ambient environment with a low temperature heat treatment applied. Stress ratio = 0.

as S_r for bending or S_{sr} for torsion. Then for torsion, for example, $S_{sa} = S_{sm} = S_{sr}/2$ and the Gerber ordinate intercept, given by Eq. (6–42) for shear, is

$$S_{se} = \frac{S_{sa}}{1 - (S_{sm}/S_{su})^2} = \frac{S_{sr}/2}{1 - \left(\frac{S_{sr}/2}{S_{su}}\right)^2} \quad (10-42)$$

So in Ex. 10–7 an estimate for the bending endurance limit from Table 10–8 would be

$$S_r = 0.45S_{ut} = 0.45(264.7) = 119.1 \text{ kpsi}$$

and from Eq. (10–42)

$$S_e = \frac{S_r/2}{1 - [S_r/(2S_{ut})]^2} = \frac{119.1/2}{1 - \left(\frac{119.1/2}{264.7}\right)^2} = 62.7 \text{ kpsi}$$

Using this in place of 67.1 kpsi in Ex. 10–7 results in $(n_f)_A = 1.03$, a reduction of 5 percent.

10–12 Helical Coil Torsion Springs

When a helical coil spring is subjected to end torsion, it is called a *torsion spring*. It is usually close-wound, as is a helical coil extension spring, but with negligible initial tension. There are single-bodied and double-bodied types as depicted in Fig. 10–9. As shown in the figure, torsion springs have ends configured to apply torsion to the coil body in a convenient manner, with short hook, hinged straight offset, straight torsion, and special ends. The ends ultimately connect a force at a distance from the coil axis to apply a torque. The most frequently encountered (and least expensive) end is the straight torsion end. If intercoil friction is to be avoided completely, the spring can be wound with a pitch that just separates the body coils. Helical coil torsion springs are usually used with a rod or arbor for reactive support when ends cannot be built in, to maintain alignment, and to provide buckling resistance if necessary.

The wire in a torsion spring is in bending, in contrast to the torsion encountered in helical coil compression and extension springs. The springs are designed to wind tighter in service. As the applied torque increases, the inside diameter of the coil decreases. Care must be taken so that the coils do not interfere with the pin, rod, or arbor. The bending mode in the coil might seem to invite square- or rectangular-cross-section wire, but cost, range of materials, and availability discourage its use.

Figure 10-9

Torsion springs. (Courtesy of
Associated Spring.)

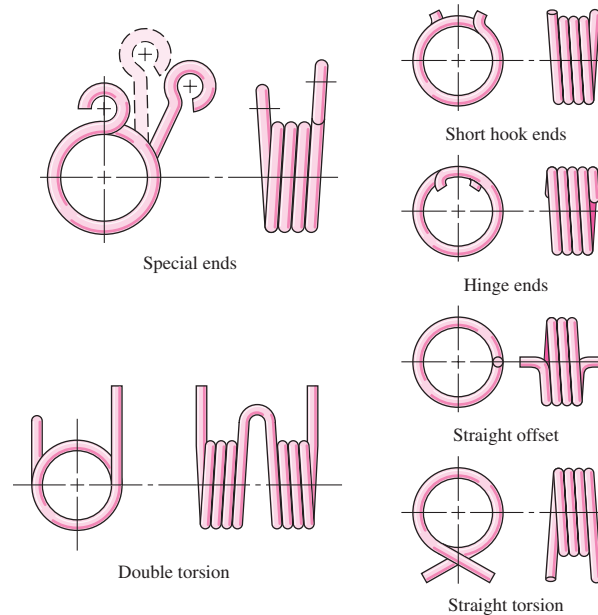


Table 10-9

End Position Tolerances
for Helical Coil Torsion
Springs (for D/d Ratios
up to and Including 16)

Source: From *Design
Handbook*, 1987, p. 52.
Courtesy of Associated
Spring.

Total Coils	Tolerance: \pm Degrees*
Up to 3	8
Over 3–10	10
Over 10–20	15
Over 20–30	20
Over 30	25

*Closer tolerances available on request.

Torsion springs are familiar in clothespins, window shades, and animal traps, where they may be seen around the house, and out of sight in counterbalance mechanisms, ratchets, and a variety of other machine components. There are many stock springs that can be purchased off-the-shelf from a vendor. This selection can add economy of scale to small projects, avoiding the cost of custom design and small-run manufacture.

Describing the End Location

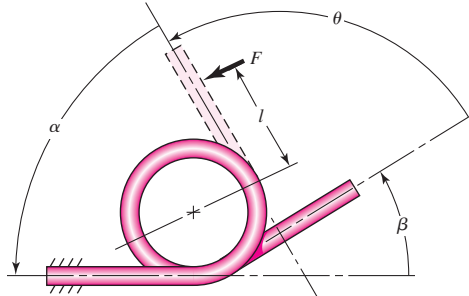
In specifying a torsion spring, the ends must be located relative to each other. Commercial tolerances on these relative positions are listed in Table 10-9. The simplest scheme for expressing the initial unloaded location of one end with respect to the other is in terms of an angle β defining the partial turn present in the coil body as $N_p = \beta/360^\circ$, as shown in Fig. 10-10. For analysis purposes the nomenclature of Fig. 10-10 can be used. Communication with a springmaker is often in terms of the back-angle α .

The number of body turns N_b is the number of turns in the free spring body by count. The body-turn count is related to the initial position angle β by

$$N_b = \text{integer} + \frac{\beta}{360^\circ} = \text{integer} + N_p$$

Figure 10-10

The free-end location angle is β . The rotational coordinate θ is proportional to the product Fl . Its back angle is α . For all positions of the moving end $\theta + \alpha = \Sigma = \text{constant}$.



where N_p is the number of partial turns. The above equation means that N_b takes on noninteger, discrete values such as 5.3, 6.3, 7.3, . . . , with successive differences of 1 as possibilities in designing a specific spring. This consideration will be discussed later.

Bending Stress

A torsion spring has bending induced in the coils, rather than torsion. This means that residual stresses built in during winding are in the same direction but of opposite sign to the working stresses that occur during use. The strain-strengthening locks in residual stresses opposing working stresses *provided* the load is always applied in the winding sense. Torsion springs can operate at bending stresses exceeding the yield strength of the wire from which it was wound.

The bending stress can be obtained from curved-beam theory expressed in the form

$$\sigma = K \frac{Mc}{I}$$

where K is a stress-correction factor. The value of K depends on the shape of the wire cross section and whether the stress sought is at the inner or outer fiber. Wahl analytically determined the values of K to be, for round wire,

$$K_i = \frac{4C^2 - C - 1}{4C(C - 1)} \quad K_o = \frac{4C^2 + C - 1}{4C(C + 1)} \quad (10-43)$$

where C is the spring index and the subscripts i and o refer to the inner and outer fibers, respectively. In view of the fact that K_o is always less than unity, we shall use K_i to estimate the stresses. When the bending moment is $M = Fr$ and the section modulus $I/c = d^3/32$, we express the bending equation as

$$\sigma = K_i \frac{32Fr}{\pi d^3} \quad (10-44)$$

which gives the bending stress for a round-wire torsion spring.

Deflection and Spring Rate

For torsion springs, angular deflection can be expressed in radians or revolutions (turns). If a term contains revolution units the term will be expressed with a prime sign. The spring rate k' is expressed in units of torque/revolution (lbf · in/rev or N · mm/rev) and moment is proportional to angle θ' expressed in turns rather than radians. The spring rate, if linear, can be expressed as

$$k' = \frac{M_1}{\theta'_1} = \frac{M_2}{\theta'_2} = \frac{M_2 - M_1}{\theta'_2 - \theta'_1} \quad (10-45)$$

where the moment M can be expressed as Fl or Fr .

The angle subtended by the end deflection of a cantilever, when viewed from the built-in ends, is y/l rad. From Table A–9–1,

$$\theta_e = \frac{y}{l} = \frac{Fl^2}{3EI} = \frac{Fl^2}{3E(\pi d^4/64)} = \frac{64Ml}{3\pi d^4 E} \quad (10-46)$$

For a straight torsion end spring, end corrections such as Eq. (10–46) must be added to the body-coil deflection. The strain energy in bending is, from Eq. (4–18),

$$U = \int \frac{M^2 dx}{2EI}$$

For a torsion spring, $M = Fl = Fr$, and integration must be accomplished over the length of the body-coil wire. The force F will deflect through a distance $r\theta$ where θ is the angular deflection of the coil body, in radians. Applying Castigliano's theorem gives

$$r\theta = \frac{\partial U}{\partial F} = \int_0^{\pi DN_b} \frac{\partial}{\partial F} \left(\frac{F^2 r^2 dx}{2EI} \right) = \int_0^{\pi DN_b} \frac{Fr^2 dx}{EI}$$

Substituting $I = \pi d^4/64$ for round wire and solving for θ gives

$$\theta = \frac{64FrDN_b}{d^4 E} = \frac{64MDN_b}{d^4 E}$$

The total angular deflection in radians is obtained by adding Eq. (10–46) for each end of lengths l_1, l_2 :

$$\theta_t = \frac{64MDN_b}{d^4 E} + \frac{64Ml_1}{3\pi d^4 E} + \frac{64Ml_2}{3\pi d^4 E} = \frac{64MD}{d^4 E} \left(N_b + \frac{l_1 + l_2}{3\pi D} \right) \quad (10-47)$$

The equivalent number of active turns N_a is expressed as

$$N_a = N_b + \frac{l_1 + l_2}{3\pi D} \quad (10-48)$$

The spring rate k in torque per radian is

$$k = \frac{Fr}{\theta_t} = \frac{M}{\theta_t} = \frac{d^4 E}{64DN_a} \quad (10-49)$$

The spring rate may also be expressed as torque per turn. The expression for this is obtained by multiplying Eq. (10–49) by 2π rad/turn. Thus spring rate k' (units torque/turn) is

$$k' = \frac{2\pi d^4 E}{64DN_a} = \frac{d^4 E}{10.2DN_a} \quad (10-50)$$

Tests show that the effect of friction between the coils and arbor is such that the constant 10.2 should be increased to 10.8. The equation above becomes

$$k' = \frac{d^4 E}{10.8DN_a} \quad (10-51)$$

(units torque per turn). Equation (10–51) gives better results. Also Eq. (10–47) becomes

$$\theta'_t = \frac{10.8MD}{d^4 E} \left(N_b + \frac{l_1 + l_2}{3\pi D} \right) \quad (10-52)$$

Torsion springs are frequently used over a round bar or pin. When the load is applied to a torsion spring, the spring winds up, causing a decrease in the inside diameter of the coil body. It is necessary to ensure that the inside diameter of the coil never becomes equal to or less than the diameter of the pin, in which case loss of spring function would ensue. The helix diameter of the coil D' becomes

$$D' = \frac{N_b D}{N_b + \theta'_c} \quad (10-53)$$

where θ'_c is the angular deflection of the body of the coil in number of turns, given by

$$\theta'_c = \frac{10.8 M D N_b}{d^4 E} \quad (10-54)$$

The new inside diameter $D'_i = D' - d$ makes the diametral clearance Δ between the body coil and the pin of diameter D_p equal to

$$\Delta = D' - d - D_p = \frac{N_b D}{N_b + \theta'_c} - d - D_p \quad (10-55)$$

Equation (10-55) solved for N_b is

$$N_b = \frac{\theta'_c (\Delta + d + D_p)}{D - \Delta - d - D_p} \quad (10-56)$$

which gives the number of body turns corresponding to a specified diametral clearance of the arbor. This angle may not be in agreement with the necessary partial-turn remainder. Thus the diametral clearance may be exceeded but not equaled.

Static Strength

First column entries in Table 10-6 can be divided by 0.577 (from distortion-energy theory) to give

$$S_y = \begin{cases} 0.78 S_{ut} & \text{Music wire and cold-drawn carbon steels} \\ 0.87 S_{ut} & \text{OQ\&T carbon and low-alloy steels} \\ 0.61 S_{ut} & \text{Austenitic stainless steel and nonferrous alloys} \end{cases} \quad (10-57)$$

Fatigue Strength

Since the spring wire is in bending, the Sines equation is not applicable. The Sines model is in the presence of pure torsion. Since Zimmerli's results were for compression springs (wire in pure torsion), we will use the repeated bending stress ($R = 0$) values provided by Associated Spring in Table 10-10. As in Eq. (10-40) we will use the Gerber fatigue-failure criterion incorporating the Associated Spring $R = 0$ fatigue strength S_r :

$$S_e = \frac{S_r/2}{1 - \left(\frac{S_r/2}{S_{ut}}\right)^2} \quad (10-58)$$

The value of S_r (and S_e) has been corrected for size, surface condition, and type of loading, but not for temperature or miscellaneous effects. The Gerber fatigue criterion is now defined. The strength-amplitude component is given by Table 6-7, p. 299, as

$$S_a = \frac{r^2 S_{ut}^2}{2 S_e} \left[-1 + \sqrt{1 + \left(\frac{2 S_e}{r S_{ut}}\right)^2} \right] \quad (10-59)$$

Table 10-10

Maximum Recommended Bending Stresses (K_B Corrected) for Helical Torsion Springs in Cyclic Applications as Percent of S_{ut}

Source: Courtesy of Associated Spring.

Fatigue Life, cycles	ASTM A228 and Type 302 Stainless Steel		ASTM A230 and A232	
	Not Shot-Peened	Shot-Peened*	Not Shot-Peened	Shot-Peened*
10^5	53	62	55	64
10^6	50	60	53	62

This information is based on the following conditions: no surging, springs are in the “as-stress-relieved” condition.

*Not always possible.

where the slope of the load line is $r = M_a/M_m$. The load line is radial through the origin of the designer’s fatigue diagram. The factor of safety guarding against fatigue failure is

$$n_f = \frac{S_a}{\sigma_a} \tag{10-60}$$

Alternatively, we can find n_f directly by using Table 6-7, p. 299:

$$n_f = \frac{1}{2} \frac{\sigma_a}{S_e} \left(\frac{S_{ut}}{\sigma_m} \right)^2 \left[-1 + \sqrt{1 + \left(2 \frac{\sigma_m}{S_{ut}} \frac{S_e}{\sigma_a} \right)^2} \right] \tag{10-61}$$

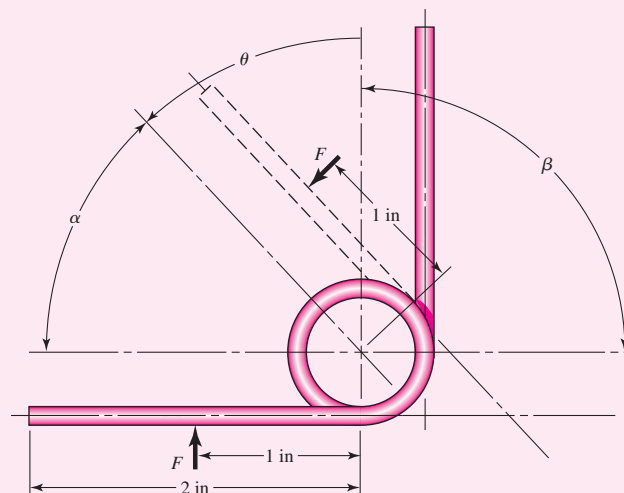
EXAMPLE 10-8

A stock spring is shown in Fig. 10-11. It is made from 0.072-in-diameter music wire and has $4\frac{1}{4}$ body turns with straight torsion ends. It works over a pin of 0.400 in diameter. The coil outside diameter is $\frac{19}{32}$ in.

- (a) Find the maximum operating torque and corresponding rotation for static loading.
- (b) Estimate the inside coil diameter and pin diametral clearance when the spring is subjected to the torque in part (a).

Figure 10-11

Angles α , β , and θ are measured between the straight-end centerline translated to the coil axis. Coil OD is $19/32$ in.



(c) Estimate the fatigue factor of safety n_f if the applied moment varies between $M_{\min} = 1$ to $M_{\max} = 5$ lbf · in.

Solution (a) For music wire, from Table 10–4 we find that $A = 201$ kpsi · in^{*m*} and $m = 0.145$. Therefore,

$$S_{ut} = \frac{A}{d^m} = \frac{201}{(0.072)^{0.145}} = 294.4 \text{ kpsi}$$

Using Eq. (10–57) gives

$$S_y = 0.78S_{ut} = 0.78(294.4) = 229.6 \text{ kpsi}$$

The mean coil diameter is $D = 19/32 - 0.072 = 0.5218$ in. The spring index $C = D/d = 0.5218/0.072 = 7.247$. The bending stress correction factor K_i from Eq. (10–43), is

$$K_i = \frac{4(7.247)^2 - 7.247 - 1}{4(7.247)(7.247 - 1)} = 1.115$$

Now rearrange Eq. (10–44), substitute S_y for σ , and solve for the maximum torque Fr to obtain

$$M_{\max} = (Fr)_{\max} = \frac{\pi d^3 S_y}{32K_i} = \frac{\pi(0.072)^3 229\,600}{32(1.115)} = 7.546 \text{ lbf} \cdot \text{in}$$

Note that no factor of safety has been used. Next, from Eq. (10–54), the number of turns of the coil body θ'_c is

$$\theta'_c = \frac{10.8MDN_b}{d^4 E} = \frac{10.8(7.546)0.5218(4.25)}{0.072^4(28.5)10^6} = 0.236 \text{ turn}$$

Answer

$$(\theta'_c)_{\text{deg}} = 0.236(360^\circ) = 85.0^\circ$$

The active number of turns N_a , from Eq. (10–48), is

$$N_a = N_b + \frac{l_1 + l_2}{3\pi D} = 4.25 + \frac{1 + 1}{3\pi(0.5218)} = 4.657 \text{ turns}$$

The spring rate of the complete spring, from Eq. (10–51), is

$$k' = \frac{0.072^4(28.5)10^6}{10.8(0.5218)4.657} = 29.18 \text{ lbf} \cdot \text{in/turn}$$

The number of turns of the complete spring θ' is

$$\theta' = \frac{M}{k'} = \frac{7.546}{29.18} = 0.259 \text{ turn}$$

Answer

$$(\theta'_s)_{\text{deg}} = 0.259(360^\circ) = 93.24^\circ$$

(b) With no load, the mean coil diameter of the spring is 0.5218 in. From Eq. (10–53),

$$D' = \frac{N_b D}{N_b + \theta'_c} = \frac{4.25(0.5218)}{4.25 + 0.236} = 0.494 \text{ in}$$

The diametral clearance between the inside of the spring coil and the pin at load is

$$\Delta = D' - d - D_p = 0.494 - 0.072 - 0.400 = 0.022 \text{ in}$$

Answer

(c) Fatigue:

$$M_a = (M_{\max} - M_{\min})/2 = (5 - 1)/2 = 2 \text{ lbf} \cdot \text{in}$$

$$M_m = (M_{\max} + M_{\min})/2 = (5 + 1)/2 = 3 \text{ lbf} \cdot \text{in}$$

$$r = \frac{M_a}{M_m} = \frac{2}{3}$$

$$\sigma_a = K_t \frac{32M_a}{\pi d^3} = 1.115 \frac{32(2)}{\pi(0.072)^3} = 60\,857 \text{ psi}$$

$$\sigma_m = \frac{M_m}{M_a} \sigma_a = \frac{3}{2}(60\,857) = 91\,286 \text{ psi}$$

From Table 10–10, $S_r = 0.50S_{ut} = 0.50(294.4) = 147.2$ kpsi. Then

$$S_e = \frac{147.2/2}{1 - \left(\frac{147.2/2}{294.4}\right)^2} = 78.51 \text{ kpsi}$$

The amplitude component of the strength S_a , from Eq. (10–59), is

$$S_a = \frac{(2/3)^2 294.4^2}{2(78.51)} \left[-1 + \sqrt{1 + \left(\frac{2}{2/3} \frac{78.51}{294.4}\right)^2} \right] = 68.85 \text{ kpsi}$$

The fatigue factor of safety is

$$n_f = \frac{S_a}{\sigma_a} = \frac{68.85}{60.86} = 1.13$$

Answer

10–13 Belleville Springs

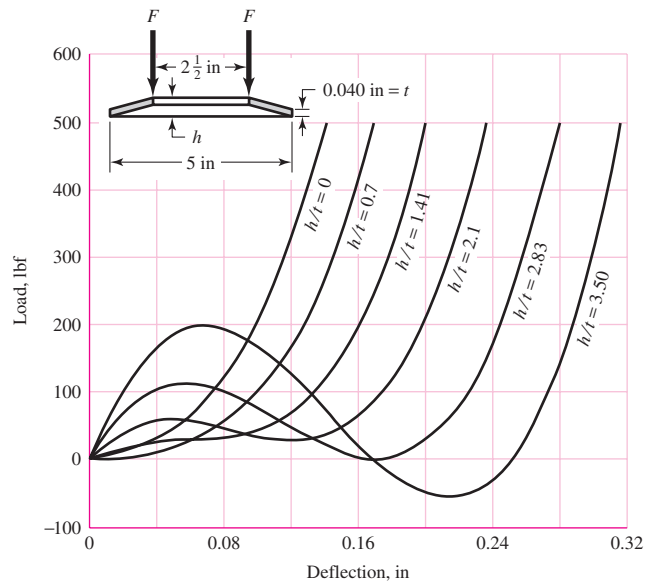
The inset of Fig. 10–12 shows a coned-disk spring, commonly called a *Belleville spring*. Although the mathematical treatment is beyond the scope of this book, you should at least become familiar with the remarkable characteristics of these springs.

Aside from the obvious advantage that a Belleville spring occupies only a small space, variation in the h/t ratio will produce a wide variety of load-deflection curve shapes, as illustrated in Fig. 10–12. For example, using an h/t ratio of 2.83 or larger gives an S curve that might be useful for snap-acting mechanisms. A reduction of the ratio to a value between 1.41 and 2.1 causes the central portion of the curve to become horizontal, which means that the load is constant over a considerable deflection range.

A higher load for a given deflection may be obtained by nesting, that is, by stacking the springs in parallel. On the other hand, stacking in series provides a larger deflection for the same load, but in this case there is danger of instability.

Figure 10-12

Load-deflection curves for Belleville springs. (Courtesy of Associated Spring.)



10-14 Miscellaneous Springs

The extension spring shown in Fig. 10-13 is made of slightly curved strip steel, not flat, so that the force required to uncoil it remains constant; thus it is called a *constant-force spring*. This is equivalent to a zero spring rate. Such springs can also be manufactured having either a positive or a negative spring rate.

A *volute spring*, shown in Fig. 10-14a, is a wide, thin strip, or “flat,” of material wound on the flat so that the coils fit inside one another. Since the coils do not stack, the solid height of the spring is the width of the strip. A variable-spring scale, in a compression volute spring, is obtained by permitting the coils to contact the support. Thus, as the deflection increases, the number of active coils decreases. The volute spring has another important advantage that cannot be obtained with round-wire springs: if the coils are wound so as to contact or slide on one another during action, the sliding friction will serve to damp out vibrations or other unwanted transient disturbances.

A *conical spring*, as the name implies, is a coil spring wound in the shape of a cone (see Prob. 10-22). Most conical springs are compression springs and are wound with round wire. But a volute spring is a conical spring too. Probably the principal advantage of this type of spring is that it can be wound so that the solid height is only a single wire diameter.

Flat stock is used for a great variety of springs, such as clock springs, power springs, torsion springs, cantilever springs, and hair springs; frequently it is specially shaped to create certain spring actions for fuse clips, relay springs, spring washers, snap rings, and retainers.

In designing many springs of flat stock or strip material, it is often economical and of value to proportion the material so as to obtain a constant stress throughout the spring material. A uniform-section cantilever spring has a stress

$$\sigma = \frac{M}{I/c} = \frac{Fx}{I/c} \quad (a)$$

Figure 10-13

Constant-force spring.
(Courtesy of Vulcan Spring &
Mfg. Co. Telford, PA.
www.vulcanspring.com.)

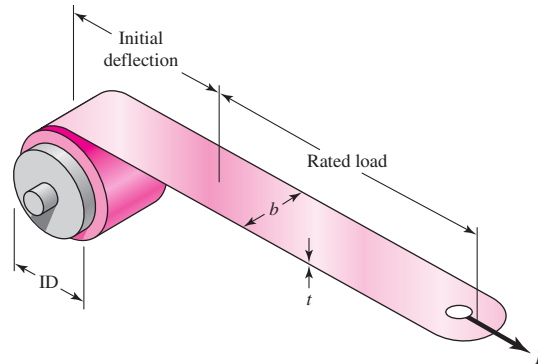
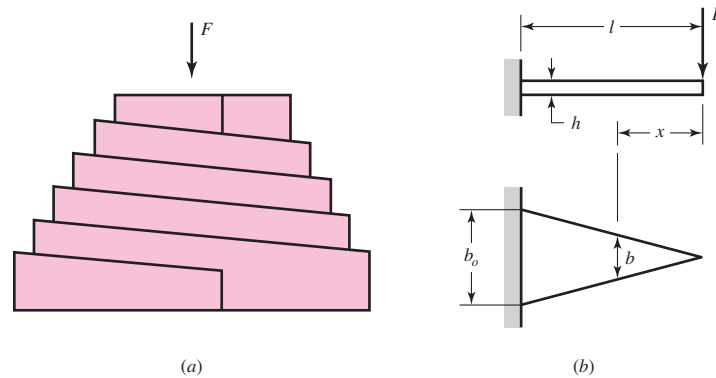


Figure 10-14

(a) A volute spring; (b) a flat
triangular spring.



which is proportional to the distance x if I/c is a constant. But there is no reason why I/c need be a constant. For example, one might design such a spring as that shown in Fig. 10–14*b*, in which the thickness h is constant but the width b is permitted to vary. Since, for a rectangular section, $I/c = bh^2/6$, we have, from Eq. (a),

$$\frac{bh^2}{6} = \frac{Fx}{\sigma}$$

or

$$b = \frac{6Fx}{h^2\sigma} \quad (b)$$

Since b is linearly related to x , the width b_o at the base of the spring is

$$b_o = \frac{6Fl}{h^2\sigma} \quad (10-62)$$

Good approximations for deflections can be found easily by using Castigliano's theorem. To demonstrate this, assume that deflection of the triangular flat spring is primarily due to bending and we can neglect the transverse shear force.¹² The bending moment as a function of x is $M = -Fx$ and the beam width at x can be expressed

¹²Note that, because of shear, the width of the beam cannot be zero at $x = 0$. So, there is already some simplification in the design model. All of this can be accounted for in a more sophisticated model.

as $b = b_o x/l$. Thus, the deflection of F is given by Eq. (4–25), p. 160, as

$$\begin{aligned} y &= \int_0^l \frac{M(\partial M/\partial F)}{EI} dx = \frac{1}{E} \int_0^l \frac{-Fx(-x)}{\frac{1}{12}(b_o x/l)h^3} dx \\ &= \frac{12Fl}{b_o h^3 E} \int_0^l x dx = \frac{6Fl^3}{b_o h^3 E} \end{aligned} \quad (10-63)$$

Thus the spring constant, $k = F/y$, is estimated as

$$k = \frac{b_o h^3 E}{6l^3} \quad (10-64)$$

The methods of stress and deflection analysis illustrated in previous sections of this chapter have served to illustrate that springs may be analyzed and designed by using the fundamentals discussed in the earlier chapters of this book. This is also true for most of the miscellaneous springs mentioned in this section, and you should now experience no difficulty in reading and understanding the literature of such springs.

10-15 Summary

In this chapter we have considered helical coil springs in considerable detail in order to show the importance of viewpoint in approaching engineering problems, their analysis, and design. For compression springs undergoing static and fatigue loads, the complete design process was presented. This was not done for extension and torsion springs, as the process is the same, although the governing conditions are not. The governing conditions, however, were provided and extension to the design process from what was provided for the compression spring should be straightforward. Problems are provided at the end of the chapter, and it is hoped that the reader will develop additional, similar, problems to tackle.

Stochastic considerations are notably missing in this chapter. The complexity and nuances of the deterministic approach alone are enough to handle in a first presentation of spring design. Springmakers offer a vast array of information concerning tolerances on springs.¹³ This, together with the material in Chaps. 5, 6, and 20, should provide the reader with ample ability to advance and incorporate statistical analyses in their design evaluations.

As spring problems become more computationally involved, programmable calculators and computers must be used. Spreadsheet programming is very popular for repetitive calculations. As mentioned earlier, commercial programs are available. With these programs, backsolving can be performed; that is, when the final objective criteria are entered, the program determines the input values.

PROBLEMS

- 10-1** Make a two-view drawing or a good freehand sketch of a helical compression spring closed to its solid height and having a wire diameter of $\frac{1}{2}$ in, outside diameter of 4 in, and one active coil. The spring is to have plain ends. Make another drawing of the same spring with ends plain and ground.

¹³See, for example, Associated Spring–Barnes Group, *Design Handbook*, Bristol, Conn., 1987.

- 10-2** It is instructive to examine the question of the units of the parameter A of Eq. (10-14). Show that for U.S. customary units the units for A_{USCU} are $\text{kpsi} \cdot \text{in}^m$ and for SI units are $\text{MPa} \cdot \text{mm}^m$ for A_{SI} , which make the dimensions of both A_{USCU} and A_{SI} different for every material to which Eq. (10-14) applies. Also show that the conversion from A_{USCU} to A_{SI} is given by

$$A_{\text{SI}} = 6.895(25.40)^m A_{\text{USCU}}$$

- 10-3** A helical compression spring is wound using 0.105-in-diameter music wire. The spring has an outside diameter of 1.225 in with plain ground ends, and 12 total coils.
- What should the free length be to ensure that when the spring is compressed solid the torsional stress does not exceed the yield strength, that is, that it is solid-safe?
 - What force is needed to compress this spring to closure?
 - Estimate the spring rate.
 - Is there a possibility that the spring might buckle in service?

- 10-4** The spring in Prob. 10-3 is to be used with a static load of 30 lbf. Perform a design assessment represented by Eqs. (10-13) and (10-18) through (10-21) if the spring is closed to solid height.

- 10-5** A helical compression spring is made of hard-drawn spring steel wire 2 mm in diameter and has an outside diameter of 22 mm. The ends are plain and ground, and there are $8\frac{1}{2}$ total coils.
- The spring is wound to a free length, which is the largest possible with a solid-safe property. Find this free length.
 - What is the pitch of this spring?
 - What force is needed to compress the spring to its solid length?
 - Estimate the spring rate.
 - Will the spring buckle in service?

- 10-6** The spring of Prob. 10-5 is to be used with a static load of 75 N. Perform a design assessment represented by Eqs. (10-13) and (10-18) through (10-21) if the spring closed to solid height.

- 10-7 to 10-17** Listed below are six springs described in customary units and five springs described in SI units. Investigate these squared-and-ground-ended helical compression springs to see if they are solid-safe. If not, what is the largest free length to which they can be wound using $n_s = 1.2$?

Problem Number	d , in	OD, in	L_0 , in	N_t	Material
10-7	0.006	0.036	0.63	40	A228 music wire
10-8	0.012	0.120	0.81	15.1	B159 phosphor-bronze
10-9	0.040	0.240	0.75	10.4	A313 stainless steel
10-10	0.135	2.0	2.94	5.25	A227 hard-drawn steel
10-11	0.144	1.0	3.75	13.0	A229 OQ&T steel
10-12	0.192	3.0	9.0	8.0	A232 chrome-vanadium

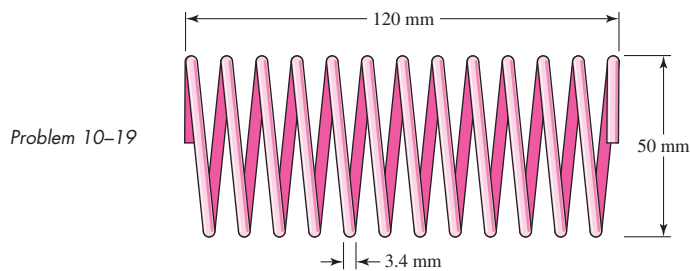
	d , mm	OD, mm	L_0 , mm	N_t	Material
10-13	0.2	0.91	15.9	40	A313 stainless steel
10-14	1.0	6.10	19.1	10.4	A228 music wire
10-15	3.4	50.8	74.6	5.25	A229 OQ&T spring steel
10-16	3.7	25.4	95.3	13.0	B159 phosphor-bronze
10-17	4.3	76.2	228.6	8.0	A232 chrome-vanadium

10-18 A static service music wire helical compression spring is needed to support a 20-lbf load after being compressed 2 in. The solid height of the spring cannot exceed $1\frac{1}{2}$ in. The free length must not exceed 4 in. The static factor of safety must equal or exceed 1.2. For robust linearity use a fractional overrun to closure ξ of 0.15. There are two springs to be designed.

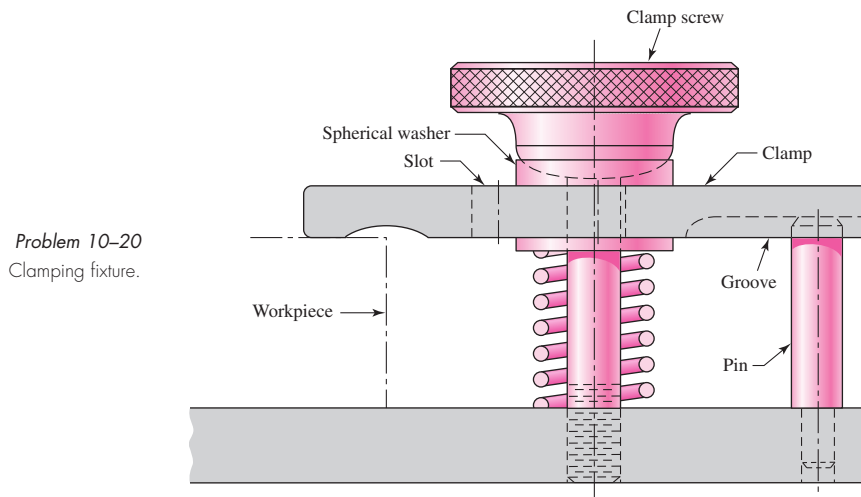
- The spring must operate over a $\frac{3}{4}$ -in rod. A 0.050-in diametral clearance allowance should be adequate to avoid interference between the rod and the spring due to out-of-round coils. Design the spring.
- The spring must operate in a 1-in-diameter hole. A 0.050-in diametral clearance allowance should be adequate to avoid interference between the spring and the hole due to swelling of the spring diameter as the spring is compressed and out-of-round coils. Design the spring.

10-19 Not all springs are made in a conventional way. Consider the special steel spring in the illustration.

- Find the pitch, solid height, and number of active turns.
- Find the spring rate. Assume the material is A227 HD steel.
- Find the force F_s required to close the spring solid.
- Find the shear stress in the spring due to the force F_s .



10-20 A holding fixture for a workpiece $1\frac{1}{2}$ in thick at clamp locations is being designed. The detail of one of the clamps is shown in the figure. A spring is required to drive the clamp upward while removing or inserting a workpiece. A clamping force of 10 lbf is satisfactory. The base plate is $\frac{5}{8}$ in thick. The clamp screw has a $\frac{7}{16}$ in-20 UNF thread. It is useful to have the free length L_0 short enough so that the clamp screw can compress the spring upon fixture reassembly during inspection and service, say $L_0 \leq 1.5 + \frac{3}{8}$ in. The spring cannot close solid at a length greater than $1\frac{1}{4}$ in. The safety factor when compressed solid should be $n_s \geq 1.2$, and at service load $n_1 \geq 1.5$. Design a suitable helical coil compression spring for this fixture.



10-21 Your instructor will provide you with a stock spring supplier's catalog, or pages reproduced from it. Accomplish the task of Prob. 10-20 by selecting an available stock spring. (This is design by *selection*.)

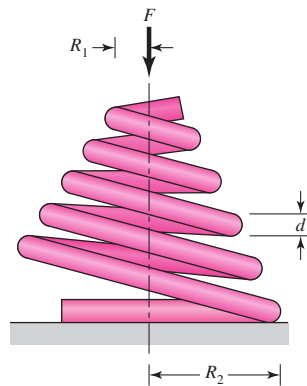
10-22 The figure shows a conical compression helical coil spring where R_1 and R_2 are the initial and final coil radii, respectively, d is the diameter of the wire, and N_a is the total number of active coils. The wire cross section primarily transmits a torsional moment, which changes with the coil radius. Let the coil radius be given by

$$R = R_1 + \frac{R_2 - R_1}{2\pi N_a} \theta$$

where θ is in radians. Use Castigliano's method to estimate the spring rate as

$$k = \frac{d^4 G}{16N_a(R_2 + R_1)(R_2^2 + R_1^2)}$$

Problem 10-22



10-23 A helical coil compression spring is needed for food service machinery. The load varies from a minimum of 4 lbf to a maximum of 18 lbf. The spring rate k is to be 9.5 lbf/in. The outside diameter of the spring cannot exceed $2\frac{1}{2}$ in. The springmaker has available suitable dies for drawing 0.080-, 0.0915-, 0.1055-, and 0.1205-in-diameter wire. Using a fatigue design factor n_f of 1.5, and the Gerber-Zimmerli fatigue-failure criterion, design a suitable spring.

10-24 Solve Prob. 10-23 using the Goodman-Zimmerli fatigue-failure criterion.

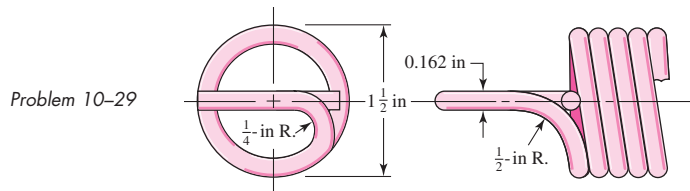
10-25 Solve Prob. 10-23 using the Sines-Zimmerli fatigue-failure criterion.

10-26 Design the spring of Ex. 10-5 using the Gerber fatigue-failure criterion.

10-27 Solve Prob. 10-26 using the Goodman-Zimmerli fatigue-failure criterion.

10-28 A hard-drawn spring steel extension spring is to be designed to carry a static load of 18 lbf with an extension of $\frac{1}{2}$ in using a design factor of $n_y = 1.5$ in bending. Use full-coil end hooks with the fullest bend radius of $r = D/2$ and $r_2 = 2d$. The free length must be less than 3 in, and the body turns must be fewer than 30. Integer and half-integer body turns allow end hooks to be placed in the same plane. This adds extra cost and is done only when necessary.

10-29 The extension spring shown in the figure has full-twisted loop ends. The material is AISI 1065 OQ&T wire. The spring has 84 coils and is close-wound with a preload of 16 lbf.
(a) Find the closed length of the spring.
(b) Find the torsional stress in the spring corresponding to the preload.



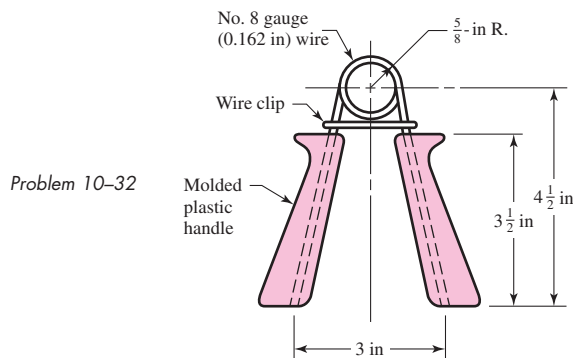
- (c) Estimate the spring rate.
 (d) What load would cause permanent deformation?
 (e) What is the spring deflection corresponding to the load found in part *d*?

10-30 Design an infinite-life helical coil extension spring with full end loops and generous loop-bend radii for a minimum load of 9 lbf and a maximum load of 18 lbf, with an accompanying stretch of $\frac{1}{4}$ in. The spring is for food-service equipment and must be stainless steel. The outside diameter of the coil cannot exceed 1 in, and the free length cannot exceed $2\frac{1}{2}$ in. Using a fatigue design factor of $n_f = 2$, complete the design.

10-31 Prove Eq. (10-40). *Hint:* Using Castigliano's theorem, determine the deflection due to bending of an end hook alone as if the hook were fixed at the end connecting it to the body of the spring. Consider the wire diameter d small as compared to the mean radius of the hook, $R = D/2$. Add the deflections of the end hooks to the deflection of the main body to determine the final spring constant, then equate it to Eq. (10-9).

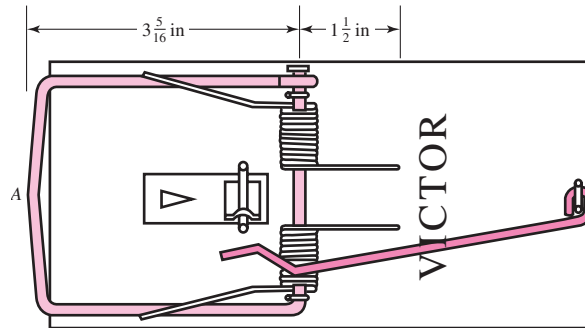
10-32 The figure shows a finger exerciser used by law-enforcement officers and athletes to strengthen their grip. It is formed by winding A227 hard-drawn steel wire around a mandrel to obtain $2\frac{1}{2}$ turns when the grip is in the closed position. After winding, the wire is cut to leave the two legs as handles. The plastic handles are then molded on, the grip is squeezed together, and a wire clip is placed around the legs to obtain initial "tension" and to space the handles for the best initial gripping position. The clip is formed like a figure 8 to prevent it from coming off. When the grip is in the closed position, the stress in the spring should not exceed the permissible stress.

- (a) Determine the configuration of the spring before the grip is assembled.
 (b) Find the force necessary to close the grip.



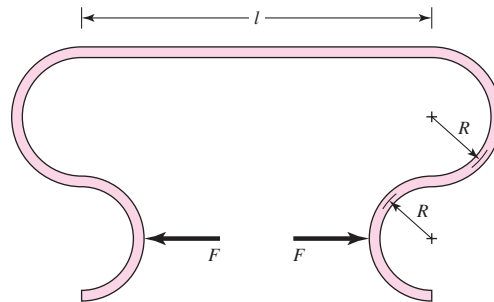
10-33 The rat trap shown in the figure uses two opposite-image torsion springs. The wire has a diameter of 0.081 in, and the outside diameter of the spring in the position shown is $\frac{1}{2}$ in. Each spring has 11 turns. Use of a fish scale revealed a force of about 8 lbf is needed to set the trap.
 (a) Find the probable configuration of the spring prior to assembly.
 (b) Find the maximum stress in the spring when the trap is set.

Problem 10–33



- 10–34** Wire form springs can be made in a variety of shapes. The clip shown operates by applying a force F . The wire diameter is d , the length of the straight section is l , and Young's modulus is E . Consider the effects of bending only, with $d \ll R$, and use Castigliano's theorem to determine the spring constant, k .

Problem 10–34



- 10–35** Using the experience gained with Prob. 10–23, write a computer program that would help in the design of helical coil compression springs.
- 10–36** Using the experience gained with Prob. 10–30, write a computer program that would help in the design of a helical coil extension spring.

11

Rolling-Contact Bearings

Chapter Outline

- 11-1** Bearing Types **550**
- 11-2** Bearing Life **553**
- 11-3** Bearing Load Life at Rated Reliability **554**
- 11-4** Bearing Survival: Reliability versus Life **555**
- 11-5** Relating Load, Life, and Reliability **557**
- 11-6** Combined Radial and Thrust Loading **559**
- 11-7** Variable Loading **564**
- 11-8** Selection of Ball and Cylindrical Roller Bearings **568**
- 11-9** Selection of Tapered Roller Bearings **571**
- 11-10** Design Assessment for Selected Rolling-Contact Bearings **582**
- 11-11** Lubrication **586**
- 11-12** Mounting and Enclosure **587**

The terms *rolling-contact bearing*, *antifriction bearing*, and *rolling bearing* are all used to describe that class of bearing in which the main load is transferred through elements in rolling contact rather than in sliding contact. In a rolling bearing the starting friction is about twice the running friction, but still it is negligible in comparison with the starting friction of a sleeve bearing. Load, speed, and the operating viscosity of the lubricant do affect the frictional characteristics of a rolling bearing. It is probably a mistake to describe a rolling bearing as “antifriction,” but the term is used generally throughout the industry.

From the mechanical designer’s standpoint, the study of antifriction bearings differs in several respects when compared with the study of other topics because the bearings they specify have already been designed. The specialist in antifriction-bearing design is confronted with the problem of designing a group of elements that compose a rolling bearing: these elements must be designed to fit into a space whose dimensions are specified; they must be designed to receive a load having certain characteristics; and finally, these elements must be designed to have a satisfactory life when operated under the specified conditions. Bearing specialists must therefore consider such matters as fatigue loading, friction, heat, corrosion resistance, kinematic problems, material properties, lubrication, machining tolerances, assembly, use, and cost. From a consideration of all these factors, bearing specialists arrive at a compromise that, in their judgment, is a good solution to the problem as stated.

We begin with an overview of bearing types; then we note that bearing life cannot be described in deterministic form. We introduce the invariant, the statistical distribution of life, which is strongly Weibullian.¹ There are some useful deterministic equations addressing load versus life at constant reliability, and we introduce the catalog rating at rating life.

The reliability-life relationship involves Weibullian statistics. The load-life-reliability relationship, combines statistical and deterministic relationships giving the designer a way to move from the desired load and life to the catalog rating in *one* equation.

Ball bearings also resist thrust, and a unit of thrust does different damage per revolution than a unit of radial load, so we must find the equivalent pure radial load that does the same damage as the existing radial and thrust loads. Next, variable loading, stepwise and continuous, is approached, and the equivalent pure radial load doing the same damage is quantified. Oscillatory loading is mentioned.

With this preparation we have the tools to consider the selection of ball and cylindrical roller bearings. The question of misalignment is quantitatively approached.

Tapered roller bearings have some complications, and our experience so far contributes to understanding them.

Having the tools to find the proper catalog ratings, we make decisions (selections), we perform a design assessment, and the bearing reliability is quantified. Lubrication and mounting conclude our introduction. Vendors’ manuals should be consulted for specific details relating to bearings of their manufacture.

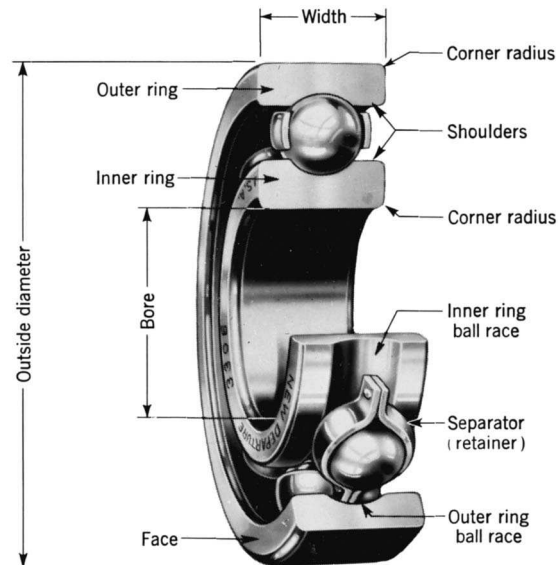
11-1 Bearing Types

Bearings are manufactured to take pure radial loads, pure thrust loads, or a combination of the two kinds of loads. The nomenclature of a ball bearing is illustrated in Fig. 11-1, which also shows the four essential parts of a bearing. These are the outer ring, the inner ring, the balls or rolling elements, and the separator. In low-priced bearings, the

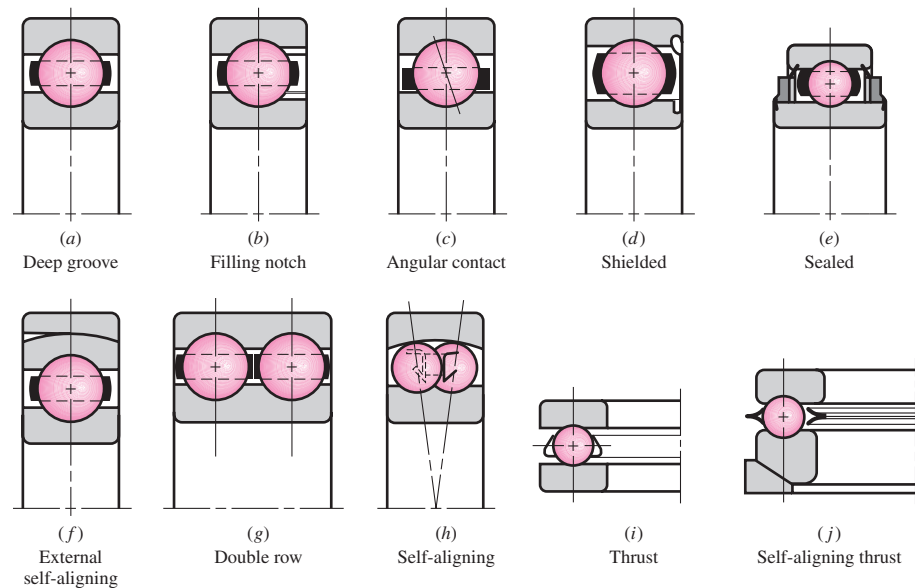
¹To completely understand the statistical elements of this chapter, the reader is urged to review Chap. 20, Secs. 20-1 through 20-3.

Figure 11-1

Nomenclature of a ball bearing. (General Motors Corp. Used with permission, GM Media Archives.)

**Figure 11-2**

Various types of ball bearings.



separator is sometimes omitted, but it has the important function of separating the elements so that rubbing contact will not occur.

In this section we include a selection from the many types of standardized bearings that are manufactured. Most bearing manufacturers provide engineering manuals and brochures containing lavish descriptions of the various types available. In the small space available here, only a meager outline of some of the most common types can be given. So you should include a survey of bearing manufacturers' literature in your studies of this section.

Some of the various types of standardized bearings that are manufactured are shown in Fig. 11-2. The single-row deep-groove bearing will take radial load as well as some thrust load. The balls are inserted into the grooves by moving the inner ring

to an eccentric position. The balls are separated after loading, and the separator is then inserted. The use of a filling notch (Fig. 11-2*b*) in the inner and outer rings enables a greater number of balls to be inserted, thus increasing the load capacity. The thrust capacity is decreased, however, because of the bumping of the balls against the edge of the notch when thrust loads are present. The angular-contact bearing (Fig. 11-2*c*) provides a greater thrust capacity.

All these bearings may be obtained with shields on one or both sides. The shields are not a complete closure but do offer a measure of protection against dirt. A variety of bearings are manufactured with seals on one or both sides. When the seals are on both sides, the bearings are lubricated at the factory. Although a sealed bearing is supposed to be lubricated for life, a method of relubrication is sometimes provided.

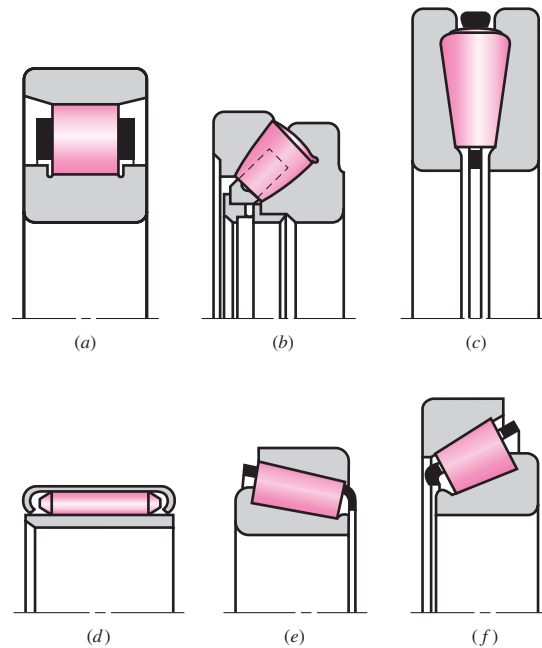
Single-row bearings will withstand a small amount of shaft misalignment or deflection, but where this is severe, self-aligning bearings may be used. Double-row bearings are made in a variety of types and sizes to carry heavier radial and thrust loads. Sometimes two single-row bearings are used together for the same reason, although a double-row bearing will generally require fewer parts and occupy less space. The one-way ball thrust bearings (Fig. 11-2*i*) are made in many types and sizes.

Some of the large variety of standard roller bearings available are illustrated in Fig. 11-3. Straight roller bearings (Fig. 11-3*a*) will carry a greater radial load than ball bearings of the same size because of the greater contact area. However, they have the disadvantage of requiring almost perfect geometry of the raceways and rollers. A slight misalignment will cause the rollers to skew and get out of line. For this reason, the retainer must be heavy. Straight roller bearings will not, of course, take thrust loads.

Helical rollers are made by winding rectangular material into rollers, after which they are hardened and ground. Because of the inherent flexibility, they will take considerable misalignment. If necessary, the shaft and housing can be used for raceways instead of separate inner and outer races. This is especially important if radial space is limited.

Figure 11-3

Types of roller bearings:
(a) straight roller; (b) spherical roller, thrust; (c) tapered roller, thrust; (d) needle; (e) tapered roller; (f) steep-angle tapered roller. (Courtesy of The Timken Company.)



The spherical-roller thrust bearing (Fig. 11–3*b*) is useful where heavy loads and misalignment occur. The spherical elements have the advantage of increasing their contact area as the load is increased.

Needle bearings (Fig. 11–3*d*) are very useful where radial space is limited. They have a high load capacity when separators are used, but may be obtained without separators. They are furnished both with and without races.

Tapered roller bearings (Fig. 11–3*e, f*) combine the advantages of ball and straight roller bearings, since they can take either radial or thrust loads or any combination of the two, and in addition, they have the high load-carrying capacity of straight roller bearings. The tapered roller bearing is designed so that all elements in the roller surface and the raceways intersect at a common point on the bearing axis.

The bearings described here represent only a small portion of the many available for selection. Many special-purpose bearings are manufactured, and bearings are also made for particular classes of machinery. Typical of these are:

- Instrument bearings, which are high-precision and are available in stainless steel and high-temperature materials
- Nonprecision bearings, usually made with no separator and sometimes having split or stamped sheet-metal races
- Ball bushings, which permit either rotation or sliding motion or both
- Bearings with flexible rollers

11-2 Bearing Life

When the ball or roller of rolling-contact bearings rolls, contact stresses occur on the inner ring, the rolling element, and on the outer ring. Because the curvature of the contacting elements in the axial direction is different from that in the radial direction, the equations for these stresses are more involved than in the Hertz equations presented in Chapter 3. If a bearing is clean and properly lubricated, is mounted and sealed against the entrance of dust and dirt, is maintained in this condition, and is operated at reasonable temperatures, then metal fatigue will be the only cause of failure. Inasmuch as metal fatigue implies many millions of stress applications successfully endured, we need a quantitative life measure. Common life measures are

- Number of revolutions of the inner ring (outer ring stationary) until the first tangible evidence of fatigue
- Number of hours of use at a standard angular speed until the first tangible evidence of fatigue

The commonly used term is *bearing life*, which is applied to either of the measures just mentioned. It is important to realize, as in all fatigue, life as defined above is a stochastic variable and, as such, has both a distribution and associated statistical parameters. The life measure of an individual bearing is defined as the total number of revolutions (or hours at a constant speed) of bearing operation until the failure criterion is developed. Under ideal conditions, the fatigue failure consists of spalling of the load-carrying surfaces. The American Bearing Manufacturers Association (ABMA) standard states that the failure criterion is the first evidence of fatigue. The fatigue criterion used by the Timken Company laboratories is the spalling or pitting of an area of 0.01 in². Timken also observes that the useful life of the bearing may extend considerably beyond this point. This is an operational definition of fatigue failure in rolling bearings.

The *rating life* is a term sanctioned by the ABMA and used by most manufacturers. The rating life of a group of nominally identical ball or roller bearings is defined as the number of revolutions (or hours at a constant speed) that 90 percent of a group of bearings will achieve or exceed before the failure criterion develops. The terms *minimum life*, L_{10} life, and B_{10} life are also used as synonyms for rating life. The rating life is the 10th percentile location of the bearing group's revolutions-to-failure distribution.

Median life is the 50th percentile life of a group of bearings. The term *average life* has been used as a synonym for median life, contributing to confusion. When many groups of bearings are tested, the median life is between 4 and 5 times the L_{10} life.

11-3 Bearing Load Life at Rated Reliability

When nominally identical groups are tested to the life-failure criterion at different loads, the data are plotted on a graph as depicted in Fig. 11-4 using a log-log transformation. To establish a single point, load F_1 and the rating life of group one $(L_{10})_1$ are the coordinates that are logarithmically transformed. The reliability associated with this point, and all other points, is 0.90. Thus we gain a glimpse of the load-life function at 0.90 reliability. Using a regression equation of the form

$$FL^{1/a} = \text{constant} \quad (11-1)$$

the result of many tests for various kinds of bearings result in

- $a = 3$ for ball bearings
- $a = 10/3$ for roller bearings (cylindrical and tapered roller)

A bearing manufacturer may choose a rated cycle value of 10^6 revolutions (or in the case of the Timken Company, $90(10^6)$ revolutions) or otherwise, as declared in the manufacturer's catalog to correspond to a basic load rating in the catalog for each bearing manufactured, as their rating life. We shall call this the *catalog load rating* and display it algebraically as C_{10} , to denote it as the 10th percentile rating life for a particular bearing in the catalog. From Eq. (11-1) we can write

$$F_1 L_1^{1/a} = F_2 L_2^{1/a} \quad (11-2)$$


and associate load F_1 with C_{10} , life measure L_1 with L_{10} , and write

$$C_{10} L_{10}^{1/a} = FL^{1/a}$$

where the units of L are revolutions.

Figure 11-4

Typical bearing load-life log-log curve.



Further, we can write

$$C_{10}(L_R n_R 60)^{1/a} = F_D (L_D n_D 60)^{1/a}$$

↑ catalog rating, lbf or kN
↑ rating life in hours
↑ rating speed, rev/min
 ↑ desired radial load, lbf or kN
↑ desired life, hours
↑ desired speed, rev/min

Solving for C_{10} gives

$$C_{10} = F_D \left(\frac{L_D n_D 60}{L_R n_R 60} \right)^{1/a} \quad (11-3)$$

EXAMPLE 11-1

Consider SKF, which rates its bearings for 1 million revolutions, so that L_{10} life is $60L_R n_R = 10^6$ revolutions. The $L_R n_R 60$ product produces a familiar number. Timken, for example, uses $90(10^6)$ revolutions. If you desire a life of 5000 h at 1725 rev/min with a load of 400 lbf with a reliability of 90 percent, for which catalog rating would you search in an SKF catalog?

Solution From Eq. (11-3),

$$C_{10} = F_D \left(\frac{L_D n_D 60}{L_R n_R 60} \right)^{1/a} = 400 \left[\frac{5000(1725)60}{10^6} \right]^{1/3} = 3211 \text{ lbf} = 14.3 \text{ kN}$$

If a bearing manufacturer rates bearings at 500 h at $33\frac{1}{3}$ rev/min with a reliability of 0.90, then $L_R n_R 60 = 500(33\frac{1}{3})60 = 10^6$ revolutions. The tendency is to substitute 10^6 for $L_R n_R 60$ in Eq. (11-3). Although it is true that the 60 terms in Eq. (11-3) as displayed cancel algebraically, they are worth keeping, because at some point in your keystroke sequence on your hand-held calculator the manufacturer's magic number (10^6 or some other number) will appear to remind you of what the rating basis is and those manufacturers' catalogs to which you are limited. Of course, if you evaluate the bracketed quantity in Eq. (11-3) by alternating between numerator and denominator entries, the magic number will not appear and you will have lost an opportunity to check.

11-4 Bearing Survival: Reliability versus Life

At constant load, the life measure distribution is right skewed as depicted in Fig. 11-5. Candidates for a distributional curve fit include lognormal and Weibull. The Weibull is by far the most popular, largely because of its ability to adjust to varying amounts of skewness. If the life measure is expressed in dimensionless form as $x = L/L_{10}$, then the reliability can be expressed as [see Eq. (20-24), p. 970]

$$R = \exp \left[- \left(\frac{x - x_0}{\theta - x_0} \right)^b \right] \quad (11-4)$$

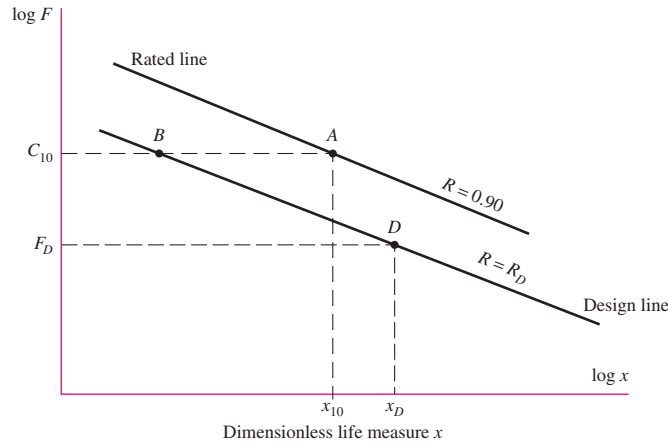
where R = reliability

x = life measure dimensionless variate, L/L_{10}

x_0 = guaranteed, or "minimum," value of the variate

Figure 11-5

Constant reliability contours. Point A represents the catalog rating C_{10} at $x = L/L_{10} = 1$. Point B is on the target reliability design line R_D , with a load of C_{10} . Point D is a point on the desired reliability contour exhibiting the design life $x_D = L_D/L_{10}$ at the design load F_D .



θ = characteristic parameter corresponding to the 63.2121 percentile value of the variate

b = shape parameter that controls the skewness

Because there are three distributional parameters, x_0 , θ , and b , the Weibull has a robust ability to conform to a data string. Also, in Eq. (11-4) an explicit expression for the cumulative distribution function is possible:

$$F = 1 - R = 1 - \exp \left[- \left(\frac{x - x_0}{\theta - x_0} \right)^b \right] \quad (11-5)$$

EXAMPLE 11-2

Construct the distributional properties of a 02-30 mm deep-groove ball bearing if the Weibull parameters are $x_0 = 0.02$, $(\theta - x_0) = 4.439$, and $b = 1.483$. Find the mean, median, 10th percentile life, standard deviation, and coefficient of variation.

Solution From Eq. (20-28), p. 971, the mean dimensionless life μ_x is

Answer
$$\mu_x = x_0 + (\theta - x_0) \Gamma \left(1 + \frac{1}{b} \right) = 0.02 + 4.439 \Gamma \left(1 + \frac{1}{1.483} \right) = 4.033$$

The median dimensionless life is, from Eq. (20-26) where $R = 0.5$,

Answer
$$x_{0.50} = x_0 + (\theta - x_0) \left(\ln \frac{1}{R} \right)^{1/b} = 0.02 + 4.439 \left(\ln \frac{1}{0.5} \right)^{1/1.483}$$

$$= 3.487$$

The 10th percentile value of the dimensionless life x is

Answer
$$x_{0.10} = 0.02 + 4.439 \left(\ln \frac{1}{0.90} \right)^{1/1.483} \doteq 1 \quad (\text{as it should be})$$

The standard deviation of the dimensionless life is given by Eq. (20–29):

$$\begin{aligned} \text{Answer} \quad \hat{\sigma}_x &= (\theta - x_0) \left[\Gamma \left(1 + \frac{2}{b} \right) - \Gamma^2 \left(1 + \frac{1}{b} \right) \right]^{1/2} \\ &= 4.439 \left[\Gamma \left(1 + \frac{2}{1.483} \right) - \Gamma^2 \left(1 + \frac{1}{1.483} \right) \right]^{1/2} = 2.753 \end{aligned}$$

The coefficient of variation of the dimensionless life is

$$\text{Answer} \quad C_x = \frac{\hat{\sigma}_x}{\mu_x} = \frac{2.753}{4.033} = 0.683$$

11-5 Relating Load, Life, and Reliability

This is the designer's problem. The desired load is not the manufacturer's test load or catalog entry. The desired speed is different from the vendor's test speed, and the reliability expectation is typically much higher than the 0.90 accompanying the catalog entry. Figure 11-5 shows the situation. The catalog information is plotted as point *A*, whose coordinates are (the logs of) C_{10} and $x_{10} = L_{10}/L_{10} = 1$, a point on the 0.90 reliability contour. The design point is at *D*, with the coordinates (the logs of) F_D and x_D , a point that is on the $R = R_D$ reliability contour. The designer must move from point *D* to point *A* via point *B* as follows. Along a constant reliability contour (*BD*), Eq. (11-2) applies:

$$F_B x_B^{1/a} = F_D x_D^{1/a}$$

from which

$$F_B = F_D \left(\frac{x_D}{x_B} \right)^{1/a} \quad (a)$$

Along a constant load line (*AB*), Eq. (11-4) applies:

$$R_D = \exp \left[- \left(\frac{x_B - x_0}{\theta - x_0} \right)^b \right]$$

Solving for x_B gives

$$x_B = x_0 + (\theta - x_0) \left(\ln \frac{1}{R_D} \right)^{1/b}$$

Now substitute this in Eq. (a) to obtain

$$F_B = F_D \left(\frac{x_D}{x_B} \right)^{1/a} = F_D \left[\frac{x_D}{x_0 + (\theta - x_0) (\ln 1/R_D)^{1/b}} \right]^{1/a}$$

However, $F_B = C_{10}$, so

$$C_{10} = F_D \left[\frac{x_D}{x_0 + (\theta - x_0) (\ln 1/R_D)^{1/b}} \right]^{1/a} \quad (11-6)$$

As useful as Eq. (11–6) is, one's attention to keystrokes and their sequence on a hand-held calculator strays, and, as a result, the most common error is keying in the inappropriate logarithm. We have the opportunity here to make Eq. (11–6) more error-proof. Note that

$$\ln \frac{1}{R_D} = \ln \frac{1}{1 - p_f} = \ln(1 + p_f + \dots) \doteq p_f = 1 - R_D$$

where p_f is the probability for failure. Equation (11–6) can be written as

$$C_{10} \doteq F_D \left[\frac{x_D}{x_0 + (\theta - x_0)(1 - R_D)^{1/b}} \right]^{1/a} \quad R \geq 0.90 \quad (11-7)$$

Loads are often nonsteady, so that the desired load is multiplied by an application factor a_f . The steady load $a_f F_D$ does the same damage as the variable load F_D does to the rolling surfaces. This point will be elaborated later.

EXAMPLE 11-3

The design load on a ball bearing is 413 lbf and an application factor of 1.2 is appropriate. The speed of the shaft is to be 300 rev/min, the life to be 30 kh with a reliability of 0.99. What is the C_{10} catalog entry to be sought (or exceeded) when searching for a deep-groove bearing in a manufacturer's catalog on the basis of 10^6 revolutions for rating life? The Weibull parameters are $x_0 = 0.02$, $(\theta - x_0) = 4.439$, and $b = 1.483$.

Solution

$$x_D = \frac{L}{L_{10}} = \frac{60L_D n_D}{60L_R n_R} = \frac{60(30\,000)300}{10^6} = 540$$

Thus, the design life is 540 times the L_{10} life. For a ball bearing, $a = 3$. Then, from Eq. (11–7),

Answer

$$C_{10} = (1.2)(413) \left[\frac{540}{0.02 + 4.439(1 - 0.99)^{1/1.483}} \right]^{1/3} = 6696 \text{ lbf}$$

We have learned to identify the catalog basic load rating corresponding to a steady radial load F_D , a desired life L_D , and a speed n_D .

Shafts generally have two bearings. Often these bearings are different. If the bearing reliability of the shaft with its pair of bearings is to be R , then R is related to the individual bearing reliabilities R_A and R_B by

$$R = R_A R_B$$

First, we observe that if the product $R_A R_B$ equals R , then, in general, R_A and R_B are both greater than R . Since the failure of either or both of the bearings results in the shutdown of the shaft, then A or B or both can create a failure. Second, in sizing bearings one can begin by making R_A and R_B equal to the square root of the reliability goal, \sqrt{R} . In Ex. 11–3, if the bearing was one of a pair, the reliability goal would be $\sqrt{0.99}$, or 0.995. The bearings selected are discrete in their reliability property in your problem, so the selection procedure “rounds up,” and the overall reliability exceeds the goal R . Third, it may be possible, if $R_A > \sqrt{R}$, to round down on B yet have the product $R_A R_B$ still exceed the goal R .

11-6 Combined Radial and Thrust Loading

A ball bearing is capable of resisting radial loading and a thrust loading. Furthermore, these can be combined. Consider F_a and F_r to be the axial thrust and radial loads, respectively, and F_e to be the *equivalent radial load* that does the same damage as the combined radial and thrust loads together. A rotation factor V is defined such that $V = 1$ when the inner ring rotates and $V = 1.2$ when the outer ring rotates. Two dimensionless groups can now be formed: F_e/VF_r and F_a/VF_r . When these two dimensionless groups are plotted as in Fig. 11-6, the data fall in a gentle curve that is well approximated by two straight-line segments. The abscissa e is defined by the intersection of the two lines. The equations for the two lines shown in Fig. 11-6 are

$$\frac{F_e}{VF_r} = 1 \quad \text{when} \quad \frac{F_a}{VF_r} \leq e \quad (11-8a)$$

$$\frac{F_e}{VF_r} = X + Y \frac{F_a}{VF_r} \quad \text{when} \quad \frac{F_a}{VF_r} > e \quad (11-8b)$$

where, as shown, X is the ordinate intercept and Y is the slope of the line for $F_a/VF_r > e$. It is common to express Eqs. (11-8a) and (11-8b) as a single equation,

$$F_e = X_i VF_r + Y_i F_a \quad (11-9)$$

where $i = 1$ when $F_a/VF_r \leq e$ and $i = 2$ when $F_a/VF_r > e$. Table 11-1 lists values of X_1 , Y_1 , X_2 , and Y_2 as a function of e , which in turn is a function of F_a/C_0 , where C_0 is the bearing static load catalog rating.

In these equations, the rotation factor V is intended to correct for the rotating-ring conditions. The factor of 1.2 for outer-ring rotation is simply an acknowledgment that the fatigue life is reduced under these conditions. Self-aligning bearings are an exception: they have $V = 1$ for rotation of either ring.

The X and Y factors in Eqs. (11-8a) and (11-8b) depend upon the geometry of the bearing, including the number of balls and the ball diameter. The ABMA

Figure 11-6

The relationship of dimensionless group $F_e/(VF_r)$ and $F_a/(VF_r)$ and the straight-line segments representing the data.

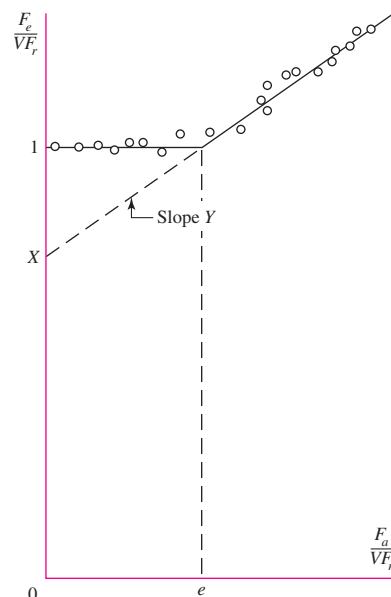


Table 11-1

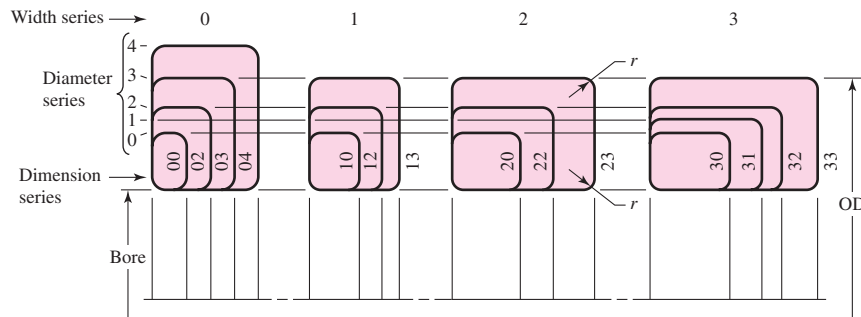
Equivalent Radial Load
Factors for Ball Bearings

F_a/C_0	e	$F_a/(VF_r) \leq e$		$F_a/(VF_r) > e$	
		X_1	Y_1	X_2	Y_2
0.014*	0.19	1.00	0	0.56	2.30
0.021	0.21	1.00	0	0.56	2.15
0.028	0.22	1.00	0	0.56	1.99
0.042	0.24	1.00	0	0.56	1.85
0.056	0.26	1.00	0	0.56	1.71
0.070	0.27	1.00	0	0.56	1.63
0.084	0.28	1.00	0	0.56	1.55
0.110	0.30	1.00	0	0.56	1.45
0.17	0.34	1.00	0	0.56	1.31
0.28	0.38	1.00	0	0.56	1.15
0.42	0.42	1.00	0	0.56	1.04
0.56	0.44	1.00	0	0.56	1.00

*Use 0.014 if $F_a/C_0 < 0.014$.

Figure 11-7

The basic ABMA plan for boundary dimensions. These apply to ball bearings, straight roller bearings, and spherical roller bearings, but not to inch-series ball bearings or tapered roller bearings. The contour of the corner is not specified. It may be rounded or chamfered, but it must be small enough to clear the fillet radius specified in the standards.



recommendations are based on the ratio of the thrust component F_a to the *basic static load rating* C_0 and a variable reference value e . The static load rating C_0 is tabulated, along with the basic dynamic load rating C_{10} , in many of the bearing manufacturers' publications; see Table 11-2, for example.

Since straight or cylindrical roller bearings will take no axial load, or very little, the Y factor is always zero.

The ABMA has established standard boundary dimensions for bearings, which define the bearing bore, the outside diameter (OD), the width, and the fillet sizes on the shaft and housing shoulders. The basic plan covers all ball and straight roller bearings in the metric sizes. The plan is quite flexible in that, for a given bore, there is an assortment of widths and outside diameters. Furthermore, the outside diameters selected are such that, for a particular outside diameter, one can usually find a variety of bearings having different bores and widths.

This basic ABMA plan is illustrated in Fig. 11-7. The bearings are identified by a two-digit number called the *dimension-series code*. The first number in the code is from the *width series*, 0, 1, 2, 3, 4, 5, and 6. The second number is from the *diameter series*

Table 11-2

Dimensions and Load Ratings for Single-Row O2-Series Deep-Groove and Angular-Contact Ball Bearings

Bore, mm	OD, mm	Width, mm	Fillet Radius, mm	Shoulder		Load Ratings, kN			
				Diameter, mm d_s	d_H	Deep Groove		Angular Contact	
						C_{10}	C_0	C_{10}	C_0
10	30	9	0.6	12.5	27	5.07	2.24	4.94	2.12
12	32	10	0.6	14.5	28	6.89	3.10	7.02	3.05
15	35	11	0.6	17.5	31	7.80	3.55	8.06	3.65
17	40	12	0.6	19.5	34	9.56	4.50	9.95	4.75
20	47	14	1.0	25	41	12.7	6.20	13.3	6.55
25	52	15	1.0	30	47	14.0	6.95	14.8	7.65
30	62	16	1.0	35	55	19.5	10.0	20.3	11.0
35	72	17	1.0	41	65	25.5	13.7	27.0	15.0
40	80	18	1.0	46	72	30.7	16.6	31.9	18.6
45	85	19	1.0	52	77	33.2	18.6	35.8	21.2
50	90	20	1.0	56	82	35.1	19.6	37.7	22.8
55	100	21	1.5	63	90	43.6	25.0	46.2	28.5
60	110	22	1.5	70	99	47.5	28.0	55.9	35.5
65	120	23	1.5	74	109	55.9	34.0	63.7	41.5
70	125	24	1.5	79	114	61.8	37.5	68.9	45.5
75	130	25	1.5	86	119	66.3	40.5	71.5	49.0
80	140	26	2.0	93	127	70.2	45.0	80.6	55.0
85	150	28	2.0	99	136	83.2	53.0	90.4	63.0
90	160	30	2.0	104	146	95.6	62.0	106	73.5
95	170	32	2.0	110	156	108	69.5	121	85.0

(outside), 8, 9, 0, 1, 2, 3, and 4. Figure 11-7 shows the variety of bearings that may be obtained with a particular bore. Since the dimension-series code does not reveal the dimensions directly, it is necessary to resort to tabulations. The O2 series is used here as an example of what is available. See Table 11-2.

The housing and shaft shoulder diameters listed in the tables should be used whenever possible to secure adequate support for the bearing and to resist the maximum thrust loads (Fig. 11-8). Table 11-3 lists the dimensions and load ratings of some straight roller bearings.

To assist the designer in the selection of bearings, most of the manufacturers' handbooks contain data on bearing life for many classes of machinery, as well as information on load-application factors. Such information has been accumulated the hard way, that is, by experience, and the beginner designer should utilize this information until he or she gains enough experience to know when deviations are possible. Table 11-4 contains recommendations on bearing life for some classes of machinery. The load-application factors in Table 11-5 serve the same purpose as factors of safety; use them to increase the equivalent load before selecting a bearing.

Figure 11-8

Shaft and housing shoulder diameters d_S and d_H should be adequate to ensure good bearing support.

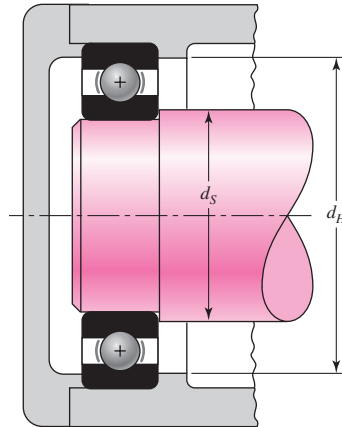


Table 11-3

Dimensions and Basic Load Ratings for Cylindrical Roller Bearings

02-Series					03-Series			
Bore, mm	OD, mm	Width, mm	Load Rating, kN		OD, mm	Width, mm	Load Rating, kN	
			C_{10}	C_0			C_{10}	C_0
25	52	15	16.8	8.8	62	17	28.6	15.0
30	62	16	22.4	12.0	72	19	36.9	20.0
35	72	17	31.9	17.6	80	21	44.6	27.1
40	80	18	41.8	24.0	90	23	56.1	32.5
45	85	19	44.0	25.5	100	25	72.1	45.4
50	90	20	45.7	27.5	110	27	88.0	52.0
55	100	21	56.1	34.0	120	29	102	67.2
60	110	22	64.4	43.1	130	31	123	76.5
65	120	23	76.5	51.2	140	33	138	85.0
70	125	24	79.2	51.2	150	35	151	102
75	130	25	93.1	63.2	160	37	183	125
80	140	26	106	69.4	170	39	190	125
85	150	28	119	78.3	180	41	212	149
90	160	30	142	100	190	43	242	160
95	170	32	165	112	200	45	264	189
100	180	34	183	125	215	47	303	220
110	200	38	229	167	240	50	391	304
120	215	40	260	183	260	55	457	340
130	230	40	270	193	280	58	539	408
140	250	42	319	240	300	62	682	454
150	270	45	446	260	320	65	781	502

Table 11-4

Bearing-Life
Recommendations
for Various Classes
of Machinery

Type of Application	Life, kh
Instruments and apparatus for infrequent use	Up to 0.5
Aircraft engines	0.5–2
Machines for short or intermittent operation where service interruption is of minor importance	4–8
Machines for intermittent service where reliable operation is of great importance	8–14
Machines for 8-h service that are not always fully utilized	14–20
Machines for 8-h service that are fully utilized	20–30
Machines for continuous 24-h service	50–60
Machines for continuous 24-h service where reliability is of extreme importance	100–200

Table 11-5

Load-Application Factors

Type of Application	Load Factor
Precision gearing	1.0–1.1
Commercial gearing	1.1–1.3
Applications with poor bearing seals	1.2
Machinery with no impact	1.0–1.2
Machinery with light impact	1.2–1.5
Machinery with moderate impact	1.5–3.0

The static load rating is given in bearing catalog tables. It comes from the equations

$$C_0 = Mn_b d_b^2 \quad (\text{ball bearings})$$

and

$$C_0 = Mn_r l_c d \quad (\text{roller bearings})$$

where C_0 = bearing static load rating, lbf (kN)

n_b = number of balls

n_r = number of rollers

d_b = diameter of balls, in (mm)

d = diameter of rollers, in (mm)

l_c = length of contact line, in (mm)

and M takes on the values of which the following table is representative:

M	in and lbf	mm and kN
Radial ball	$1.78(10)^3$	$5.11(10)^3$
Ball thrust	$7.10(10)^3$	$20.4(10)^3$
Radial roller	$3.13(10)^3$	$8.99(10)^3$
Roller thrust	$14.2(10)^3$	$40.7(10)^3$

EXAMPLE 11-4

An SKF 6210 angular-contact ball bearing has an axial load F_a of 400 lbf and a radial load F_r of 500 lbf applied with the outer ring stationary. The basic static load rating C_0 is 4450 lbf and the basic load rating C_{10} is 7900 lbf. Estimate the L_{10} life at a speed of 720 rev/min.

Solution $V = 1$ and $F_a/C_0 = 400/4450 = 0.090$. Interpolate for e in Table 11-1:

F_a/C_0	e
0.084	0.28
0.090	e from which $e = 0.285$
0.110	0.30

$F_a/(VF_r) = 400/[(1)500] = 0.8 > 0.285$. Thus, interpolate for Y_2 :

F_a/C_0	Y_2
0.084	1.55
0.090	Y_2 from which $Y_2 = 1.527$
0.110	1.45

From Eq. (11-9),

$$F_e = X_2 VF_r + Y_2 F_a = 0.56(1)500 + 1.527(400) = 890.8 \text{ lbf}$$

With $L_D = L_{10}$ and $F_D = F_e$, solving Eq. (11-3) for L_{10} gives

Answer
$$L_{10} = \frac{60L_R n_R}{60n_D} \left(\frac{C_{10}}{F_e} \right)^a = \frac{10^6}{60(720)} \left(\frac{7900}{890.8} \right)^3 = 16\,150 \text{ h}$$

We now know how to combine a steady radial load and a steady thrust load into an equivalent steady radial load F_e that inflicts the same damage per revolution as the radial-thrust combination.

11-7 Variable Loading

Bearing loads are frequently variable and occur in some identifiable patterns:

- Piecewise constant loading in a cyclic pattern
- Continuously variable loading in a repeatable cyclic pattern
- Random variation

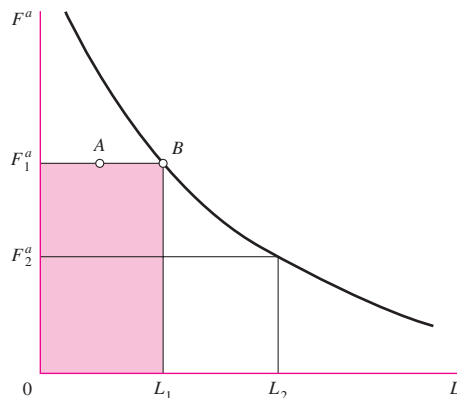
Equation (11-1) can be written as

$$F^a L = \text{constant} = K \quad (a)$$

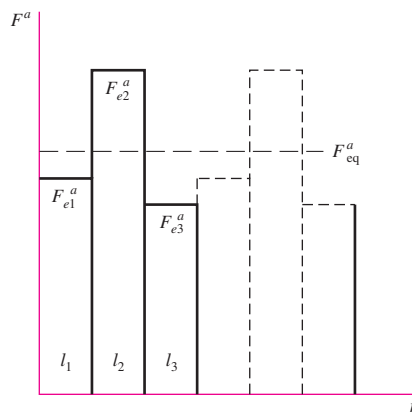
Note that F may already be an equivalent steady radial load for a radial-thrust load combination. Figure 11-9 is a plot of F^a as ordinate and L as abscissa for Eq. (a). If a load level of F_1 is selected and run to the failure criterion, then the area under the F_1 - L_1 trace is numerically equal to K . The same is true for a load level F_2 ; that is, the area under the F_2 - L_2 trace is numerically equal to K . The linear damage theory says that in the case of load level F_1 , the area from $L = 0$ to $L = L_A$ does damage measured by $F_1^a L_A = D$.

Figure 11-9

Plot of F^a as ordinate and L as abscissa for $F^a L = \text{constant}$. The linear damage hypothesis says that in the case of load F_1 , the area under the curve from $L = 0$ to $L = L_A$ is a measure of the damage $D = F_1^a L_A$. The complete damage to failure is measured by $C_{10}^a L_B$.

**Figure 11-10**

A three-part piecewise-continuous periodic loading cycle involving loads F_{e1} , F_{e2} , and F_{e3} . F_{eq} is the equivalent steady load inflicting the same damage when run for $l_1 + l_2 + l_3$ revolutions, doing the same damage D per period.



Consider the piecewise continuous cycle depicted in Fig. 11-10. The loads F_{ei} are equivalent steady radial loads for combined radial–thrust loads. The damage done by loads F_{e1} , F_{e2} , and F_{e3} is

$$D = F_{e1}^a l_1 + F_{e2}^a l_2 + F_{e3}^a l_3 \quad (b)$$

where l_i is the number of revolutions at life L_i . The equivalent steady load F_{eq} when run for $l_1 + l_2 + l_3$ revolutions does the same damage D . Thus

$$D = F_{eq}^a (l_1 + l_2 + l_3) \quad (c)$$

Equating Eqs. (b) and (c), and solving for F_{eq} , we get

$$F_{eq} = \left[\frac{F_{e1}^a l_1 + F_{e2}^a l_2 + F_{e3}^a l_3}{l_1 + l_2 + l_3} \right]^{1/a} = \left[\sum f_i F_{ei}^a \right]^{1/a} \quad (11-10)$$

where f_i is the fraction of revolution run up under load F_{ei} . Since l_i can be expressed as $n_i t_i$, where n_i is the rotational speed at load F_{ei} and t_i is the duration of that speed, then it follows that

$$F_{eq} = \left[\frac{\sum n_i t_i F_{ei}^a}{\sum n_i t_i} \right]^{1/a} \quad (11-11)$$

The character of the individual loads can change, so an application factor (a_f) can be prefixed to each F_{ei} as $(a_{fi} F_{ei})^a$; then Eq. (11-10) can be written

$$F_{eq} = \left[\sum f_i (a_{fi} F_{ei})^a \right]^{1/a} \quad L_{eq} = \frac{K}{F_{eq}^a} \quad (11-12)$$

EXAMPLE 11-5

A ball bearing is run at four piecewise continuous steady loads as shown in the following table. Columns (1), (2), and (5) to (8) are given.

(1)	(2)	(3)	(4)	(5)	(6)	(7)	(8)	(9)
Time Fraction	Speed, rev/min	Product, Column (1) × (2)	Turns Fraction, (3)/Σ(3)	F_{rir} , lbf	F_{air} , lbf	F_{eir} , lbf	a_{fi}	$a_{fi} F_{ei}$, lbf
0.1	2000	200	0.077	600	300	794	1.10	873
0.1	3000	300	0.115	300	300	626	1.25	795
0.3	3000	900	0.346	750	300	878	1.10	966
0.5	2400	<u>1200</u>	<u>0.462</u>	375	300	668	1.25	835
		2600	1.000					

Columns 1 and 2 are multiplied to obtain column 3. The column 3 entry is divided by the sum of column 3, 2600, to give column 4. Columns 5, 6, and 7 are the radial, axial, and equivalent loads respectively. Column 8 is the appropriate application factor. Column 9 is the product of columns 7 and 8.

Solution From Eq. (11-10), with $a = 3$, the equivalent radial load F_e is

Answer
$$F_e = [0.077(873)^3 + 0.115(795)^3 + 0.346(966)^3 + 0.462(835)^3]^{1/3} = 884 \text{ lbf}$$

Sometimes the question after several levels of loading is: How much life is left if the next level of stress is held until failure? Failure occurs under the linear damage hypothesis when the damage D equals the constant $K = F^a L$. Taking the first form of Eq. (11-10), we write

$$F_{eq}^a L_{eq} = F_{e1}^a l_1 + F_{e2}^a l_2 + F_{e3}^a l_3$$

and note that

$$K = F_{e1}^a L_1 = F_{e2}^a L_2 = F_{e3}^a L_3$$

and K also equals

$$K = F_{e1}^a l_1 + F_{e2}^a l_2 + F_{e3}^a l_3 = \frac{K}{L_1} l_1 + \frac{K}{L_2} l_2 + \frac{K}{L_3} l_3 = K \sum \frac{l_i}{L_i}$$

From the outer parts of the preceding equation we obtain

$$\sum \frac{l_i}{L_i} = 1 \tag{11-13}$$

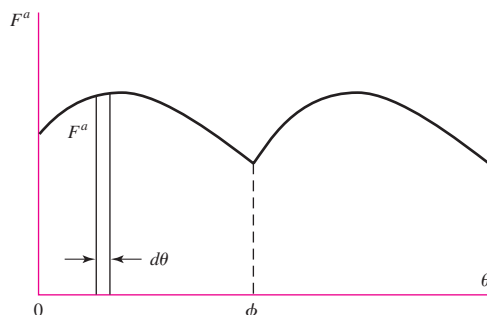
This equation was advanced by Palmgren in 1924, and again by Miner in 1945. See Eq. (6-58), p. 315.

The second kind of load variation mentioned is continuous, periodic variation, depicted by Fig. 11-11. The differential damage done by F^a during rotation through the angle $d\theta$ is

$$dD = F^a d\theta$$

Figure 11-11

A continuous load variation of a cyclic nature whose period is ϕ .



An example of this would be a cam whose bearings rotate with the cam through the angle $d\theta$. The total damage during a complete cam rotation is given by

$$D = \int dD = \int_0^{\phi} F^a d\theta = F_{\text{eq}}^a \phi$$

from which, solving for the equivalent load, we obtain

$$F_{\text{eq}} = \left[\frac{1}{\phi} \int_0^{\phi} F^a d\theta \right]^{1/a} \quad L_{\text{eq}} = \frac{K}{F_{\text{eq}}^a} \quad (11-14)$$

The value of ϕ is often 2π , although other values occur. Numerical integration is often useful to carry out the indicated integration, particularly when a is not an integer and trigonometric functions are involved. We have now learned how to find the steady equivalent load that does the same damage as a continuously varying cyclic load.

EXAMPLE 11-6

The operation of a particular rotary pump involves a power demand of $P = \bar{P} + A' \sin \theta$ where \bar{P} is the average power. The bearings feel the same variation as $F = \bar{F} + A \sin \theta$. Develop an application factor a_f for this application of ball bearings.

Solution From Eq. (11-14), with $a = 3$,

$$\begin{aligned} F_{\text{eq}} &= \left(\frac{1}{2\pi} \int_0^{2\pi} F^a d\theta \right)^{1/a} = \left(\frac{1}{2\pi} \int_0^{2\pi} (\bar{F} + A \sin \theta)^3 d\theta \right)^{1/3} \\ &= \left[\frac{1}{2\pi} \left(\int_0^{2\pi} \bar{F}^3 d\theta + 3\bar{F}^2 A \int_0^{2\pi} \sin \theta d\theta + 3\bar{F} A^2 \int_0^{2\pi} \sin^2 \theta d\theta \right. \right. \\ &\quad \left. \left. + A^3 \int_0^{2\pi} \sin^3 \theta d\theta \right) \right]^{1/3} \\ F_{\text{eq}} &= \left[\frac{1}{2\pi} (2\pi \bar{F}^3 + 0 + 3\pi \bar{F} A^2 + 0) \right]^{1/3} = \bar{F} \left[1 + \frac{3}{2} \left(\frac{A}{\bar{F}} \right)^2 \right]^{1/3} \end{aligned}$$

In terms of \bar{F} , the application factor is

$$\text{Answer} \quad a_f = \left[1 + \frac{3}{2} \left(\frac{A}{\bar{F}} \right)^2 \right]^{1/3}$$

We can present the result in tabular form:

A/\bar{F}	a_f
0	1
0.2	1.02
0.4	1.07
0.6	1.15
0.8	1.25
1.0	1.36

11-8 Selection of Ball and Cylindrical Roller Bearings

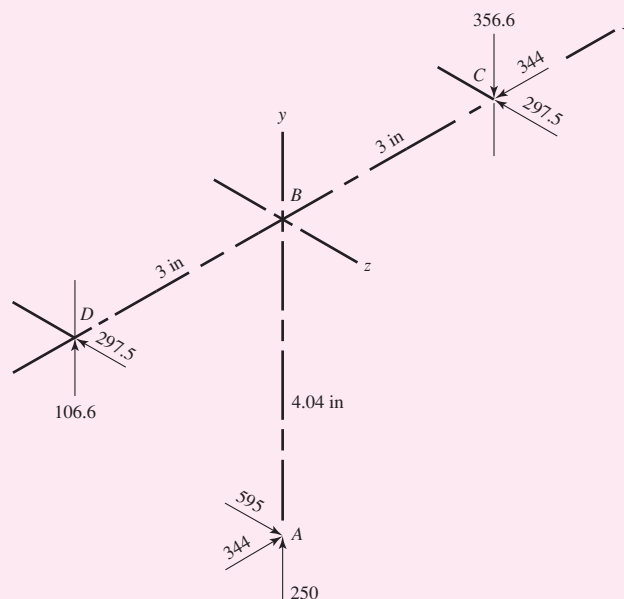
We have enough information concerning the loading of rolling-contact ball and roller bearings to develop the steady equivalent radial load that will do as much damage to the bearing as the existing loading. Now let's put it to work.

EXAMPLE 11-7

The second shaft on a parallel-shaft 25-hp foundry crane speed reducer contains a helical gear with a pitch diameter of 8.08 in. Helical gears transmit components of force in the tangential, radial, and axial directions (see Chap. 13). The components of the gear force transmitted to the second shaft are shown in Fig. 11-12, at point A. The bearing reactions at C and D, assuming simple-supports, are also shown. A ball bearing is to be selected for location C to accept the thrust, and a cylindrical roller

Figure 11-12

Forces in pounds applied to the second shaft of the helical gear speed reducer of Ex. 11-7.



bearing is to be utilized at location D . The life goal of the speed reducer is 10 kh, with a reliability factor for the ensemble of all four bearings (both shafts) to equal or exceed 0.96 for the Weibull parameters of Ex. 11–3. The application factor is to be 1.2.

(a) Select the roller bearing for location D .

(b) Select the ball bearing (angular contact) for location C , assuming the inner ring rotates.

Solution The torque transmitted is $T = 595(4.04) = 2404 \text{ lbf} \cdot \text{in}$. The speed at the rated horsepower, given by Eq. (3–40), p. 138, is

$$n_D = \frac{63\,025H}{T} = \frac{63\,025(25)}{2404} = 655.4 \text{ rev/min}$$

The radial load at D is $\sqrt{106.6^2 + 297.5^2} = 316.0 \text{ lbf}$, and the radial load at C is $\sqrt{356.6^2 + 297.5^2} = 464.4 \text{ lbf}$. The individual bearing reliabilities, if equal, must be at least $\sqrt[4]{0.96} = 0.98985 \doteq 0.99$. The dimensionless design life for both bearings is

$$x_D = \frac{L}{L_{10}} = \frac{60L_D n_D}{60L_R n_R} = \frac{60(10\,000)655.4}{10^6} = 393.2$$

(a) From Eq. (11–7), the Weibull parameters of Ex. 11–3, an application factor of 1.2, and $a = 10/3$ for the roller bearing at D , the catalog rating should be equal to or greater than

$$\begin{aligned} C_{10} &= a_f F_D \left[\frac{x_D}{x_0 + (\theta - x_0)(1 - R_D)^{1/b}} \right]^{1/a} \\ &= 1.2(316.0) \left[\frac{393.2}{0.02 + 4.439(1 - 0.99)^{1/1.483}} \right]^{3/10} = 3591 \text{ lbf} = 16.0 \text{ kN} \end{aligned}$$

Answer The absence of a thrust component makes the selection procedure simple. Choose a 02-25 mm series, or a 03-25 mm series cylindrical roller bearing from Table 11–3.

(b) The ball bearing at C involves a thrust component. This selection procedure requires an iterative procedure. Assuming $F_a/(V F_r) > e$,

- 1 Choose Y_2 from Table 11–1.
- 2 Find C_{10} .
- 3 Tentatively identify a suitable bearing from Table 11–2, note C_0 .
- 4 Using F_a/C_0 enter Table 11–1 to obtain a new value of Y_2 .
- 5 Find C_{10} .
- 6 If the same bearing is obtained, stop.
- 7 If not, take next bearing and go to step 4.

As a first approximation, take the middle entry from Table 11–1:

$$X_2 = 0.56 \quad Y_2 = 1.63.$$

From Eq. (11–8b), with $V = 1$,

$$\frac{F_e}{V F_r} = X + \frac{Y F_a}{V F_r} = 0.56 + 1.63 \frac{344}{(1)464.4} = 1.77$$

$$F_e = 1.77 V F_r = 1.77(1)464.4 = 822 \text{ lbf} \quad \text{or} \quad 3.66 \text{ kN}$$

From Eq. (11-7), with $a = 3$,

$$C_{10} = 1.2(3.66) \left[\frac{393.2}{0.02 + 4.439(1 - 0.99)^{1/1.483}} \right]^{1/3} = 53.4 \text{ kN}$$

From Table 11-2, angular-contact bearing 02-60 mm has $C_{10} = 55.9$ kN. C_0 is 35.5 kN. Step 4 becomes, with F_a in kN,

$$\frac{F_a}{C_0} = \frac{344(4.45)10^{-3}}{35.5} = 0.0431$$

which makes e from Table 11-1 approximately 0.24. Now $F_a/[VF_r] = 344/[(1)464.4] = 0.74$, which is greater than 0.24, so we find Y_2 by interpolation:

F_a/C_0	Y_2
0.042	1.85
0.043	Y_2 from which $Y_2 = 1.84$
0.056	1.71

From Eq. (11-8b),

$$\frac{F_e}{VF_r} = 0.56 + 1.84 \frac{344}{464.4} = 1.92$$

$$F_e = 1.92VF_r = 1.92(1)464.4 = 892 \text{ lbf} \quad \text{or} \quad 3.97 \text{ kN}$$

The prior calculation for C_{10} changes only in F_e , so

$$C_{10} = \frac{3.97}{3.66} 53.4 = 57.9 \text{ kN}$$

From Table 11-2 an angular contact bearing 02-65 mm has $C_{10} = 63.7$ kN and C_0 of 41.5 kN. Again,

$$\frac{F_a}{C_0} = \frac{344(4.45)10^{-3}}{41.5} = 0.0369$$

making e approximately 0.23. Now from before, $F_a/VF_r = 0.74$, which is greater than 0.23. We find Y_2 again by interpolation:

F_a/C_0	Y_2
0.028	1.99
0.0369	Y_2 from which $Y_2 = 1.90$
0.042	1.85

From Eq. (11-8b),

$$\frac{F_e}{VF_r} = 0.56 + 1.90 \frac{344}{464.4} = 1.967$$

$$F_e = 1.967VF_r = 1.967(1)464.4 = 913.5 \text{ lbf} \quad \text{or} \quad 4.065 \text{ kN}$$

The prior calculation for C_{10} changes only in F_e , so

$$C_{10} = \frac{4.07}{3.66} 53.4 = 59.4 \text{ kN}$$

Answer From Table 11–2 an angular-contact 02-65 mm is still selected, so the iteration is complete.

11–9 Selection of Tapered Roller Bearings

Tapered roller bearings have a number of features that make them complicated. As we address the differences between tapered roller and ball and cylindrical roller bearings, note that the underlying fundamentals are the same, but that there are differences in detail. Moreover, bearing and cup combinations are not necessarily priced in proportion to capacity. Any catalog displays a mix of high-production, low-production, and successful special-order designs. Bearing suppliers have computer programs that will take your problem descriptions, give intermediate design assessment information, and list a number of satisfactory cup-and-cone combinations in order of decreasing cost. Company sales offices provide access to comprehensive engineering services to help designers select and apply their bearings. At a large original equipment manufacturer's plant, there may be a resident bearing company representative.

Take a few minutes to go to your department's design library and look at a bearing supplier's engineering catalog, such as The Timken Company's *Bearing Selection Handbook—Revised* (1986). There is a log of engineering information and detail, based on long and successful experience. All we can do here is introduce the vocabulary, show congruence to fundamentals that were learned earlier, offer examples, and develop confidence. Finally, problems should reinforce the learning experience.

Form

The four components of a tapered roller bearing assembly are the

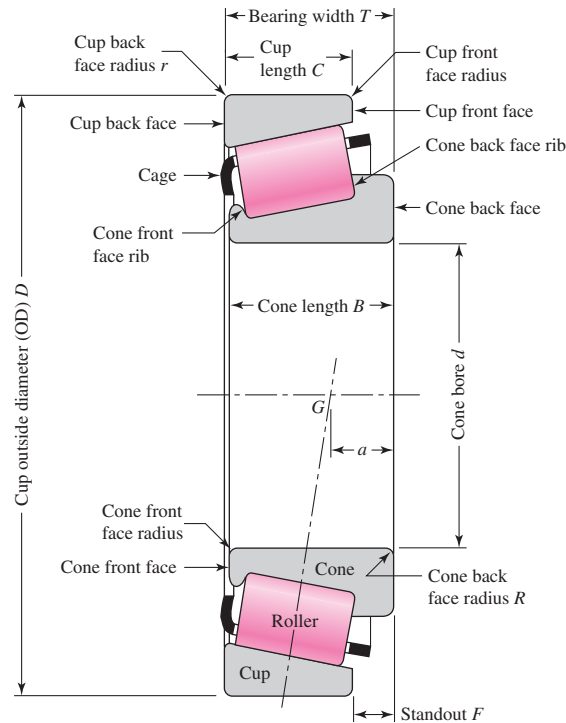
- Cone (inner ring)
- Cup (outer ring)
- Tapered rollers
- Cage (spacer-retainer)

The assembled bearing consists of two separable parts: (1) the cone assembly: the cone, the rollers, and the cage; and (2) the cup. Bearings can be made as single-row, two-row, four-row, and thrust-bearing assemblies. Additionally, auxiliary components such as spacers and closures can be used.

A tapered roller bearing can carry both radial and thrust (axial) loads, or any combination of the two. However, even when an external thrust load is not present, the radial load will induce a thrust reaction within the bearing because of the taper. To avoid the separation of the races and the rollers, this thrust must be resisted by an equal and opposite force. One way of generating this force is to always use at least two tapered roller bearings on a shaft. Two bearings can be mounted with the cone backs facing each other, in a configuration called *direct mounting*, or with the cone fronts facing each other, in what is called *indirect mounting*. Figure 11–13 shows the nomenclature of a tapered roller bearing, and the point G through which radial and axial components of load act.

Figure 11-13

Nomenclature of a tapered roller bearing. Point G is the location of the effective load center; use this point to estimate the radial bearing load. (Courtesy of The Timken Company.)



A radial load will induce a thrust reaction. The *load zone* includes about half the rollers and subtends an angle of approximately 180° . Using the symbol $F_{a(180)}$ for the induced thrust load from a radial load with a 180° load zone, Timken provides the equation

$$F_{a(180)} = \frac{0.47F_r}{K} \quad (11-15)$$

where the K factor is geometry-specific, coming from the relationship

$$K = 0.389 \cot \alpha$$

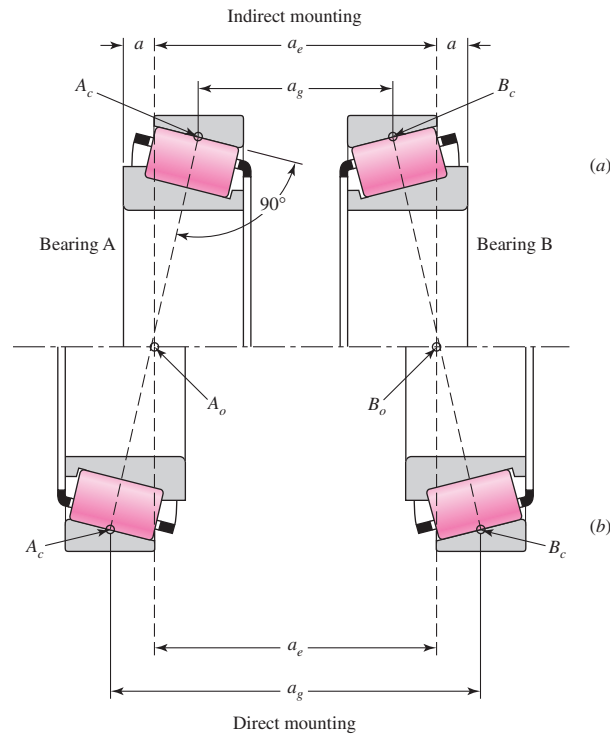
where α is half the included cup angle. The K factor is the ratio of the radial load rating to the thrust load rating. The K factor can be first approximated with 1.5 for a radial bearing and 0.75 for a steep angle bearing in the preliminary selection process. After a possible bearing is identified, the exact value of K for each bearing can be found in the *Bearing Selection Handbook—Revised* (1986) in the case of Timken bearings.

Notation

The catalog rating C corresponding to 90 percent reliability was denoted C_{10} earlier in the chapter, the subscript 10 denoting 10 percent failure level. Timken denoted its catalog ratings as C_{90} , the subscript 90 standing for “at 90 million revolutions.” The failure fraction is still 10 percent (90 percent reliability). This should produce no difficulties since Timken’s catalog ratings for radial and thrust loads display neither C_{90} nor $C_{a(90)}$ at the head of the columns. See Fig. 11-15, which is a reproduction of two Timken catalog pages.

Figure 11-14

Comparison of mounting stability between indirect and direct mountings. (Courtesy of The Timken Company.)



Location of Reactions

Figure 11-14 shows a pair of tapered roller bearings mounted directly (*b*) and indirectly (*a*) with the bearing reaction locations A_0 and B_0 shown for the shaft. For the shaft as a beam, the span is a_e , the effective spread. It is through points A_0 and B_0 that the radial loads act perpendicular to the shaft axis, and the thrust loads act along the shaft axis. The geometric spread a_g for the direct mounting is greater than for the indirect mounting. With indirect mounting the bearings are closer together compared to the direct mounting; however, the system stability is the same (a_e is the same in both cases). Thus direct and indirect mounting involve space and compactness needed or desired, but with the same system stability.

Relating Load, Life, and Reliability

Recall Eq. (11-7) for a three-parameter Weibull model,

$$C_{10} = F_D \left[\frac{x_D}{x_0 + (\theta - x_0)(1 - R_D)^{1/b}} \right]^{1/a}$$

Solving for x_D gives

$$x_D = x_0 + (\theta - x_0)(1 - R_D)^{1/b} \left(\frac{C_{10}}{F_D} \right)^a$$

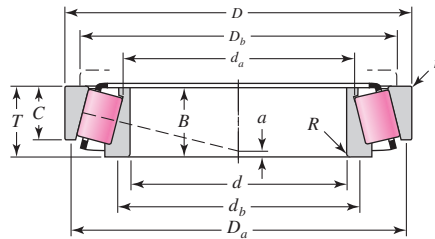
SINGLE-ROW STRAIGHT BORE

bore d	outside diameter D	width T	rating at 500 rpm for 3000 hours L_{10}		factor K	eff. load center a [Ⓢ]	part numbers		max shaft fillet radius R [Ⓢ]	cone		cup		max housing fillet radius r [Ⓢ]	width C	backing shoulder diameters	
			one-row radial N lbf	thrust N lbf			cone	cup		width B	backing shoulder diameters		D_b			D_a	
			d_b	d_a			d_b	d_a									
25.000 0.9843	52.000 2.0472	16.250 0.6398	8190 1840	5260 1180	1.56	-3.6 -0.14	◆30205	◆30205	1.0 0.04	15.000 0.5906	30.5 1.20	29.0 1.14	1.0 0.04	13.000 0.5118	46.0 1.81	48.5 1.91	
25.000 0.9843	52.000 2.0472	19.250 0.7579	9520 2140	9510 2140	1.00	-3.0 -0.12	◆32205-B	◆32205-B	1.0 0.04	18.000 0.7087	34.0 1.34	31.0 1.22	1.0 0.04	15.000 0.5906	43.5 1.71	49.5 1.95	
25.000 0.9843	52.000 2.0472	22.000 0.8661	13200 2980	7960 1790	1.66	-7.6 -0.30	◆33205	◆33205	1.0 0.04	22.000 0.8661	34.0 1.34	30.5 1.20	1.0 0.04	18.000 0.7087	44.5 1.75	49.0 1.93	
25.000 0.9843	62.000 2.4409	18.250 0.7185	13000 2930	6680 1500	1.95	-5.1 -0.20	◆30305	◆30305	1.5 0.06	17.000 0.6693	32.5 1.28	30.0 1.18	1.5 0.06	15.000 0.5906	55.0 2.17	57.0 2.24	
25.000 0.9843	62.000 2.4409	25.250 0.9941	17400 3910	8930 2010	1.95	-9.7 -0.38	◆32305	◆32305	1.5 0.06	24.000 0.9449	35.0 1.38	31.5 1.24	1.5 0.06	20.000 0.7874	54.0 2.13	57.0 2.24	
25.159 0.9905	50.005 1.9687	13.495 0.5313	6990 1570	4810 1080	1.45	-2.8 -0.11	07096	07196	1.5 0.06	14.260 0.5614	31.5 1.24	29.5 1.16	1.0 0.04	9.525 0.3750	44.5 1.75	47.0 1.85	
25.400 1.0000	50.005 1.9687	13.495 0.5313	6990 1570	4810 1080	1.45	-2.8 -0.11	07100	07196	1.0 0.04	14.260 0.5614	30.5 1.20	29.5 1.16	1.0 0.04	9.525 0.3750	44.5 1.75	47.0 1.85	
25.400 1.0000	50.005 1.9687	13.495 0.5313	6990 1570	4810 1080	1.45	-2.8 -0.11	07100-S	07196	1.5 0.06	14.260 0.5614	31.5 1.24	29.5 1.16	1.0 0.04	9.525 0.3750	44.5 1.75	47.0 1.85	
25.400 1.0000	50.292 1.9800	14.224 0.5600	7210 1620	4620 1040	1.56	-3.3 -0.13	L44642	L44610	3.5 0.14	14.732 0.5800	36.0 1.42	29.5 1.16	1.3 0.05	10.668 0.4200	44.5 1.75	47.0 1.85	
25.400 1.0000	50.292 1.9800	14.224 0.5600	7210 1620	4620 1040	1.56	-3.3 -0.13	L44643	L44610	1.3 0.05	14.732 0.5800	31.5 1.24	29.5 1.16	1.3 0.05	10.668 0.4200	44.5 1.75	47.0 1.85	
25.400 1.0000	51.994 2.0470	15.011 0.5910	6990 1570	4810 1080	1.45	-2.8 -0.11	07100	07204	1.0 0.04	14.260 0.5614	30.5 1.20	29.5 1.16	1.3 0.05	12.700 0.5000	45.0 1.77	48.0 1.89	
25.400 1.0000	56.896 2.2400	19.368 0.7625	10900 2450	5740 1290	1.90	-6.9 -0.27	1780	1729	0.8 0.03	19.837 0.7810	30.5 1.20	30.0 1.18	1.3 0.05	15.875 0.6250	49.0 1.93	51.0 2.01	
25.400 1.0000	57.150 2.2500	19.431 0.7650	11700 2620	10900 2450	1.07	-3.0 -0.12	M84548	M84510	1.5 0.06	19.431 0.7650	36.0 1.42	33.0 1.30	1.5 0.06	14.732 0.5800	48.5 1.91	54.0 2.13	
25.400 1.0000	58.738 2.3125	19.050 0.7500	11600 2610	6560 1470	1.77	-5.8 -0.23	1986	1932	1.3 0.05	19.355 0.7620	32.5 1.28	30.5 1.20	1.3 0.05	15.080 0.5937	52.0 2.05	54.0 2.13	
25.400 1.0000	59.530 2.3437	23.368 0.9200	13900 3140	13000 2930	1.07	-5.1 -0.20	M84249	M84210	0.8 0.03	23.114 0.9100	36.0 1.42	32.5 1.27	1.5 0.06	18.288 0.7200	49.5 1.95	56.0 2.20	
25.400 1.0000	60.325 2.3750	19.842 0.7812	11000 2480	6550 1470	1.69	-5.1 -0.20	15578	15523	1.3 0.05	17.462 0.6875	32.5 1.28	30.5 1.20	1.5 0.06	15.875 0.6250	51.0 2.01	54.0 2.13	
25.400 1.0000	61.912 2.4375	19.050 0.7500	12100 2730	7280 1640	1.67	-5.8 -0.23	15101	15243	0.8 0.03	20.638 0.8125	32.5 1.28	31.5 1.24	2.0 0.08	14.288 0.5625	54.0 2.13	58.0 2.28	
25.400 1.0000	62.000 2.4409	19.050 0.7500	12100 2730	7280 1640	1.67	-5.8 -0.23	15100	15245	3.5 0.14	20.638 0.8125	38.0 1.50	31.5 1.24	1.3 0.05	14.288 0.5625	55.0 2.17	58.0 2.28	
25.400 1.0000	62.000 2.4409	19.050 0.7500	12100 2730	7280 1640	1.67	-5.8 -0.23	15101	15245	0.8 0.03	20.638 0.8125	32.5 1.28	31.5 1.24	1.3 0.05	14.288 0.5625	55.0 2.17	58.0 2.28	
25.400 1.0000	62.000 2.4409	19.050 0.7500	12100 2730	7280 1640	1.67	-5.8 -0.23	15102	15245	1.5 0.06	20.638 0.8125	34.0 1.34	31.5 1.24	1.3 0.05	14.288 0.5625	55.0 2.17	58.0 2.28	
25.400 1.0000	62.000 2.4409	20.638 0.8125	12100 2730	7280 1640	1.67	-5.8 -0.23	15101	15244	0.8 0.03	20.638 0.8125	32.5 1.28	31.5 1.24	1.3 0.05	15.875 0.6250	55.0 2.17	58.0 2.28	
25.400 1.0000	63.500 2.5000	20.638 0.8125	12100 2730	7280 1640	1.67	-5.8 -0.23	15101	15250	0.8 0.03	20.638 0.8125	32.5 1.28	31.5 1.24	1.3 0.05	15.875 0.6250	56.0 2.20	59.0 2.32	
25.400 1.0000	63.500 2.5000	20.638 0.8125	12100 2730	7280 1640	1.67	-5.8 -0.23	15101	15250X	0.8 0.03	20.638 0.8125	32.5 1.28	31.5 1.24	1.5 0.06	15.875 0.6250	55.0 2.17	59.0 2.32	
25.400 1.0000	64.292 2.5312	21.433 0.8438	14500 3250	13500 3040	1.07	-3.3 -0.13	M86643	M86610	1.5 0.06	21.433 0.8438	38.0 1.50	36.5 1.44	1.5 0.06	16.670 0.6563	54.0 2.13	61.0 2.40	

Figure 11-15

Catalog entry of single-row straight-bore Timken roller bearings, in part. (Courtesy of The Timken Company.)

SINGLE-ROW STRAIGHT BORE



bore d	outside diameter D	width T	rating at 500 rpm for 3000 hours L_{10}		fac- tor K	eff. load center a [⊖]	part numbers		max shaft fillet radius R [⊕]	cone		cup		max housing fillet radius r [⊕]	width C	backing shoulder diameters	
			one- row radial N lbf	thrust N lbf			cone	cup		width B	backing shoulder diameters d_b d_a						
										d_b	d_a	D_b	D_a				
25.400 1.0000	65.088 2.5625	22.225 0.8750	13100 2950	16400 3690	0.80	-2.3 -0.09	23100	23256	1.5 0.06	21.463 0.8450	39.0 1.54	34.5 1.36	1.5 0.06	15.875 0.6250	53.0 2.09	63.0 2.48	
25.400 1.0000	66.421 2.6150	23.812 0.9375	18400 4140	8000 1800	2.30	-9.4 -0.37	2687	2631	1.3 0.05	25.433 1.0013	33.5 1.32	31.5 1.24	1.3 0.05	19.050 0.7500	58.0 2.28	60.0 2.36	
25.400 1.0000	68.262 2.6875	22.225 0.8750	15300 3440	10900 2450	1.40	-5.1 -0.20	02473	02420	0.8 0.03	22.225 0.8750	34.5 1.36	33.5 1.32	1.5 0.06	17.462 0.6875	59.0 2.32	63.0 2.48	
25.400 1.0000	72.233 2.8438	25.400 1.0000	18400 4140	17200 3870	1.07	-4.6 -0.18	HM88630	HM88610	0.8 0.03	25.400 1.0000	39.5 1.56	39.5 1.56	2.3 0.09	19.842 0.7812	60.0 2.36	69.0 2.72	
25.400 1.0000	72.626 2.8593	30.162 1.1875	22700 5110	13000 2910	1.76	-10.2 -0.40	3189	3120	0.8 0.03	29.997 1.1810	35.5 1.40	35.0 1.38	3.3 0.13	23.812 0.9375	61.0 2.40	67.0 2.64	
26.157 1.0298	62.000 2.4409	19.050 0.7500	12100 2730	7280 1640	1.67	-5.8 -0.23	15103	15245	0.8 0.03	20.638 0.8125	33.0 1.30	32.5 1.28	1.3 0.05	14.288 0.5625	55.0 2.17	58.0 2.28	
26.162 1.0300	63.100 2.4843	23.812 0.9375	18400 4140	8000 1800	2.30	-9.4 -0.37	2682	2630	1.5 0.06	25.433 1.0013	34.5 1.36	32.0 1.26	0.8 0.03	19.050 0.7500	57.0 2.24	59.0 2.32	
26.162 1.0300	66.421 2.6150	23.812 0.9375	18400 4140	8000 1800	2.30	-9.4 -0.37	2682	2631	1.5 0.06	25.433 1.0013	34.5 1.36	32.0 1.26	1.3 0.05	19.050 0.7500	58.0 2.28	60.0 2.36	
26.975 1.0620	58.738 2.3125	19.050 0.7500	11600 2610	6560 1470	1.77	-5.8 -0.23	1987	1932	0.8 0.03	19.355 0.7620	32.5 1.28	31.5 1.24	1.3 0.05	15.080 0.5937	52.0 2.05	54.0 2.13	
† 26.988 † 1.0625	50.292 1.9800	14.224 0.5600	7210 1620	4620 1040	1.56	-3.3 -0.13	L44649	L44610	3.5 0.14	14.732 0.5800	37.5 1.48	31.0 1.22	1.3 0.05	10.668 0.4200	44.5 1.75	47.0 1.85	
† 26.988 † 1.0625	60.325 2.3750	19.842 0.7812	11000 2480	6550 1470	1.69	-5.1 -0.20	15580	15523	3.5 0.14	17.462 0.6875	38.5 1.52	32.0 1.26	1.5 0.06	15.875 0.6250	51.0 2.01	54.0 2.13	
† 26.988 † 1.0625	62.000 2.4409	19.050 0.7500	12100 2730	7280 1640	1.67	-5.8 -0.23	15106	15245	0.8 0.03	20.638 0.8125	33.5 1.32	33.0 1.30	1.3 0.05	14.288 0.5625	55.0 2.17	58.0 2.28	
† 26.988 † 1.0625	66.421 2.6150	23.812 0.9375	18400 4140	8000 1800	2.30	-9.4 -0.37	2688	2631	1.5 0.06	25.433 1.0013	35.0 1.38	33.0 1.30	1.3 0.05	19.050 0.7500	58.0 2.28	60.0 2.36	
28.575 1.1250	56.896 2.2400	19.845 0.7813	11600 2610	6560 1470	1.77	-5.8 -0.23	1985	1930	0.8 0.03	19.355 0.7620	34.0 1.34	33.5 1.32	0.8 0.03	15.875 0.6250	51.0 2.01	54.0 2.11	
28.575 1.1250	57.150 2.2500	17.462 0.6875	11000 2480	6550 1470	1.69	-5.1 -0.20	15590	15520	3.5 0.14	17.462 0.6875	39.5 1.56	33.5 1.32	1.5 0.06	13.495 0.5313	51.0 2.01	53.0 2.09	
28.575 1.1250	58.738 2.3125	19.050 0.7500	11600 2610	6560 1470	1.77	-5.8 -0.23	1985	1932	0.8 0.03	19.355 0.7620	34.0 1.34	33.5 1.32	1.3 0.05	15.080 0.5937	52.0 2.05	54.0 2.13	
28.575 1.1250	58.738 2.3125	19.050 0.7500	11600 2610	6560 1470	1.77	-5.8 -0.23	1988	1932	3.5 0.14	19.355 0.7620	39.5 1.56	33.5 1.32	1.3 0.05	15.080 0.5937	52.0 2.05	54.0 2.13	
28.575 1.1250	60.325 2.3750	19.842 0.7812	11000 2480	6550 1470	1.69	-5.1 -0.20	15590	15523	3.5 0.14	17.462 0.6875	39.5 1.56	33.5 1.32	1.5 0.06	15.875 0.6250	51.0 2.01	54.0 2.13	
28.575 1.1250	60.325 2.3750	19.845 0.7813	11600 2610	6560 1470	1.77	-5.8 -0.23	1985	1931	0.5 0.03	19.355 0.7620	34.0 1.34	33.5 1.32	1.3 0.05	15.875 0.6250	52.0 2.05	55.0 2.17	

⊕ These maximum fillet radii will be cleared by the bearing corners.

⊖ Minus value indicates center is inside cone backface.

† For standard class ONLY, the maximum metric size is a whole millimetre value.

* For "J" part tolerances—see metric tolerances, page 73, and fitting practice, page 65.

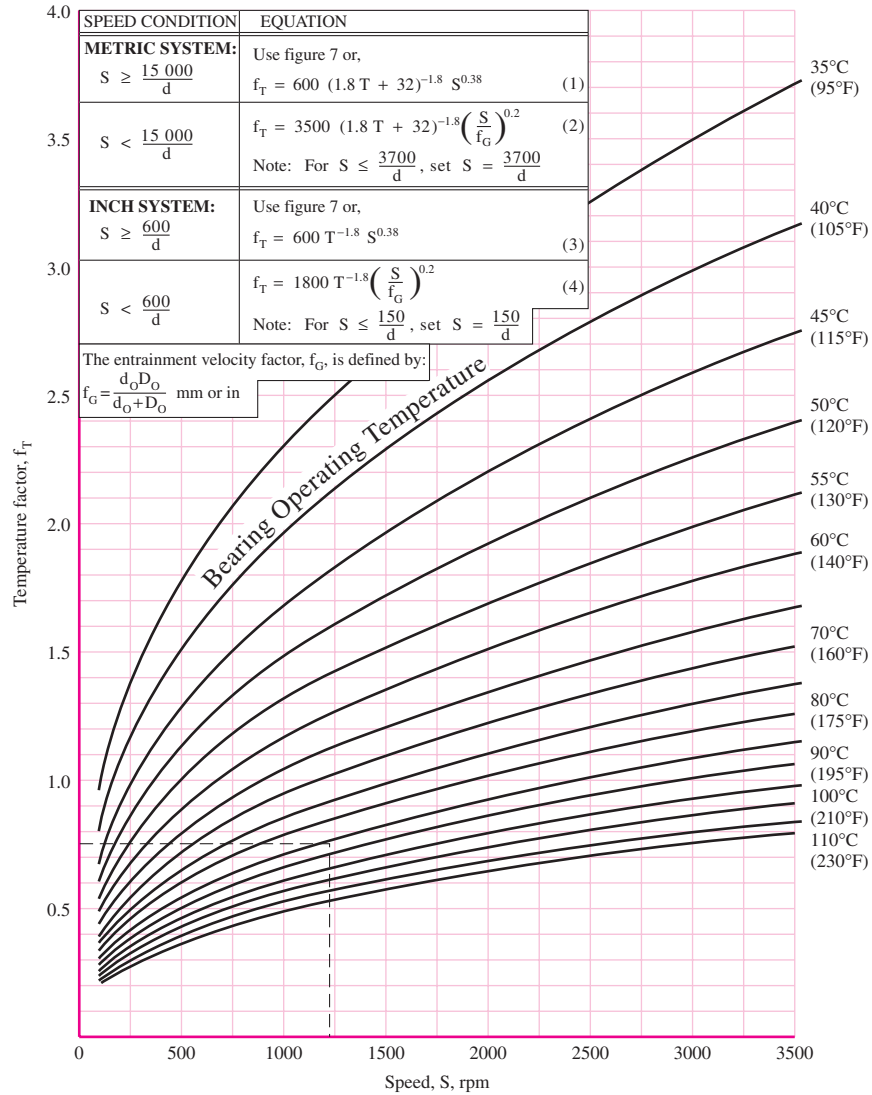
◆ ISO cone and cup combinations are designated with a common part number and should be purchased as an assembly. For ISO bearing tolerances—see metric tolerances, page 73, and fitting practice, page 65.

Figure 11-15

(Continued)

Figure 11-16

Temperature factor f_T as a function of speed and bearing operating temperature. For speed S less than $15\,000/d$ use equation shown in inset when d is bearing bore in millimeters (less than $600/d$ when bearing bore is in inches). (Courtesy of The Timken Company.)



Timken uses a two-parameter Weibull model with $x_0 = 0$, $\theta = 4.48$, and $b = \frac{3}{2}$. So, x_D for a Timken tapered roller bearing, with $a = \frac{10}{3}$, is

$$x_D = 4.48(1 - R_D)^{2/3} \left(\frac{C_{10}}{F_D}\right)^{10/3}$$

Now x_D is the desired life in multiples of rating life. The Timken design life equation is written in terms of revolutions, and for Timken's $L_{10} = 90(10^6)$ revolutions, we can express $x_D = L_D/90(10^6)$. From the equation for x_D above,

$$L_D = 4.48(1 - R_D)^{2/3} \left(\frac{C_{10}}{F_D}\right)^{10/3} 90(10^6)$$

where L_D is in revolutions.

Timken writes this equation as

$$L_D = a_1 a_2 a_3 a_4 \left(\frac{C_{10}}{F_D} \right)^{10/3} 90(10^6) \quad (11-16)$$

$4.48 (1 - R_D)^{2/3}$ ———— ↑ ↑ ↑ ↑
 bearing material ———— ↑ ↑ ↑ ↑
 $a_3 = a_{3k} a_{3l} a_{3m}$ ———— ↑ ↑ ↑
 ———— ↑ ↑ ↑ alignment
 ———— ↑ ↑ ↑ lubricant $a_{3l} = f_T f_v$
 ———— ↑ ↑ ↑ load zone

Temperature factor f_T can be found in Fig. 11-16, and viscosity factor f_v can be found in Fig. 11-17.

For the usual case, $a_2 = a_{3k} = a_{3m} = 1$, and solving the preceding equation for C_{10} gives

$$C_{10} = a_f P \left[\frac{L_D}{4.48 f_T f_v (1 - R_D)^{2/3} 90(10^6)} \right]^{3/10} \quad (L_D \text{ in revolutions}) \quad (11-17)$$

where F_D is replaced by $a_f P$. The load P is the dynamic equivalent load of the combination F_r and F_a of Sec. 11-6. The particular values of X and Y are given in

Figure 11-17

Viscosity factor f_v as a function of oil viscosity. (This graph applies to petroleum oil with a viscosity index of approximately 90.) (Courtesy of The Timken Company.)

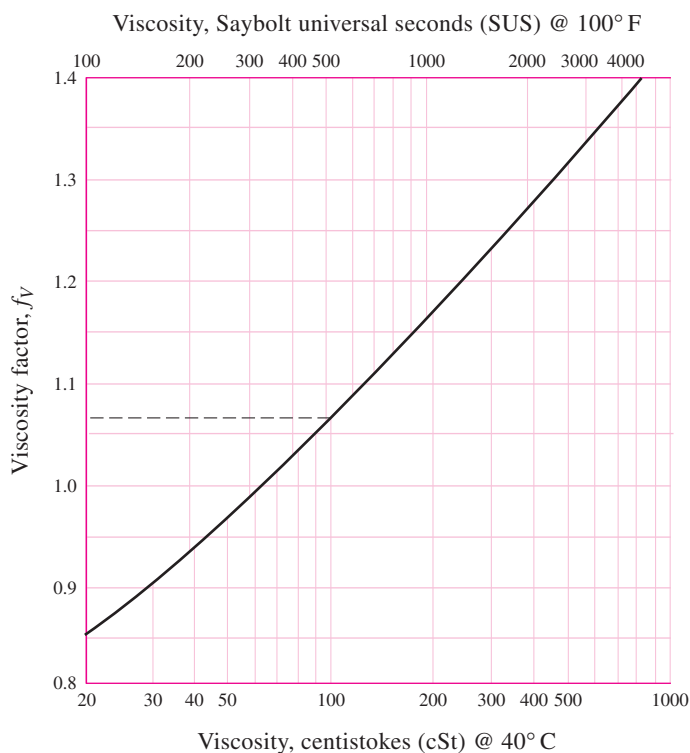


Table 11–6, in the various expressions for the radial equivalent load P in the right-hand column. In using the table, first determine whether the design is direct mounting ($m = 1$) or indirect mounting ($m = -1$). Next, evaluate the thrust conditions, and depending on which condition is met, apply the appropriate sets of thrust load and/or dynamic equivalent radial load equations. This will be demonstrated in the example that follows.

Table 11–6

Dynamic Equivalent Radial Load Equations for P (Source: Courtesy of The Timken Company.)

Two-Row Mounting, Fixed or Floating (with No External Thrust, $F_{ae} = 0$) Similar Bearing Series

For two-row similar bearing series with no external thrust, $F_{ae} = 0$, the dynamic equivalent radial load P equals F_{rAB} or F_{rC} . Since F_{rAB} or F_{rC} is the radial load on the two-row assembly, the two-row basic dynamic radial load rating, $C_{90(2)}$, is to be used to calculate bearing life.

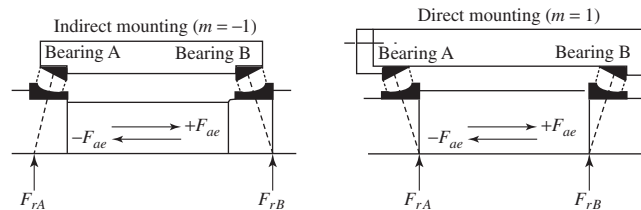
OPTIONAL APPROACH FOR DETERMINING DYNAMIC EQUIVALENT RADIAL LOADS

The following is a general approach to determining the dynamic equivalent radial loads and therefore is more suitable for programmable calculators and computer programming. Here a factor m has to be defined as $+1$ for direct-mounted single-row or two-row bearings or -1 for indirect-mounted bearings. Also a sign convention is necessary for the external thrust F_{ae} as follows:

- a. In case of external thrust applied to the shaft (typical rotating cone application), F_{ae} to the right is positive, to the left is negative.
- b. When external thrust is applied to the housing (typical rotating cup application), F_{ae} to the right is negative, to the left is positive.

1. Single-Row Mounting

Design



Thrust Condition	Thrust Load	Dynamic Equivalent Radial Load
$\frac{0.47F_{rA}}{K_A} \leq \frac{0.47F_{rB}}{K_B} - mF_{ae}$	$F_{aA} = \frac{0.47F_{rB}}{K_B} - mF_{ae}$ $F_{aB} = \frac{0.47F_{rB}}{K_B}$	$P_A = 0.4F_{rA} + K_A F_{aA}$ $P_B = F_{rB}$
$\frac{0.47F_{rA}}{K_A} > \frac{0.47F_{rB}}{K_B} - mF_{ae}$	$F_{aA} = \frac{0.47F_{rA}}{K_A}$ $F_{aB} = \frac{0.47F_{rAB}}{K_A} + mF_{ae}$	$P_A = F_{rA}$ $P_B = 0.4F_{rB} + K_B F_{aB}$

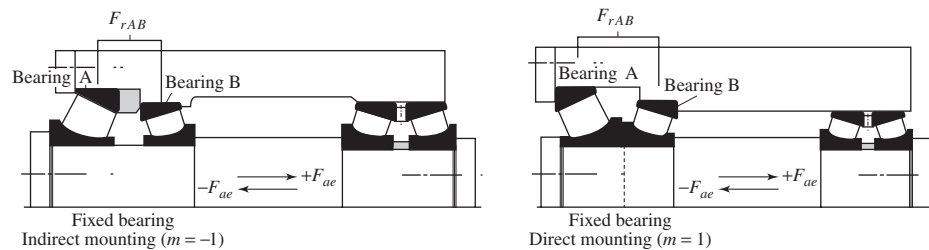
Note: If $P_A < F_{rA}$, use $P_A = F_{rA}$ or if $P_B < F_{rB}$, use $P_B = F_{rB}$.

Table 11-6

(Continued)

2. Two-Row Mounting—Fixed Bearing with External Thrust, F_{ae}

(Similar or Dissimilar Series)

Design**Thrust Condition*****Dynamic Equivalent
Radial Load**

$$F_{ae} \leq \frac{0.6 F_{rAB}}{K}$$

$$P_A = \frac{K_A}{K_A + K_B} (F_{rAB} - 1.67 m K_B F_{ae})$$

$$P_B = \frac{K_B}{K_A + K_B} (F_{rAB} + 1.67 m K_A F_{ae})$$

$$F_{ae} > \frac{0.6 F_{rAB}}{K}$$

$$P_A = 0.4 F_{rAB} - m K_A F_{ae}$$

$$P_B = 0.4 F_{rAB} + m K_B F_{ae}$$

* If mF_{ae} is positive, $K = K_B$; if mF_{ae} is negative, $K = K_A$.

Note: F_{rAB} is the radial load on the two-row assembly. The single-row basic dynamic radial load rating, C_{90} , is to be applied in calculating life by the above equations.

EXAMPLE 11-8

The shaft depicted in Fig. 11-18a carries a helical gear with a tangential force of 3980 N, a separating force of 1770 N, and a thrust force of 1690 N at the pitch cylinder with directions shown. The pitch diameter of the gear is 200 mm. The shaft runs at a speed of 1050 rev/min, and the span (effective spread) between the direct-mount bearings is 150 mm. The design life is to be 5000 h and an application factor of 1 is appropriate. The lubricant will be ISO VG 68 (68 cSt at 40°C) oil with an estimated operating temperature of 55°C. If the reliability of the bearing set is to be 0.99, select suitable single-row tapered-roller Timken bearings.

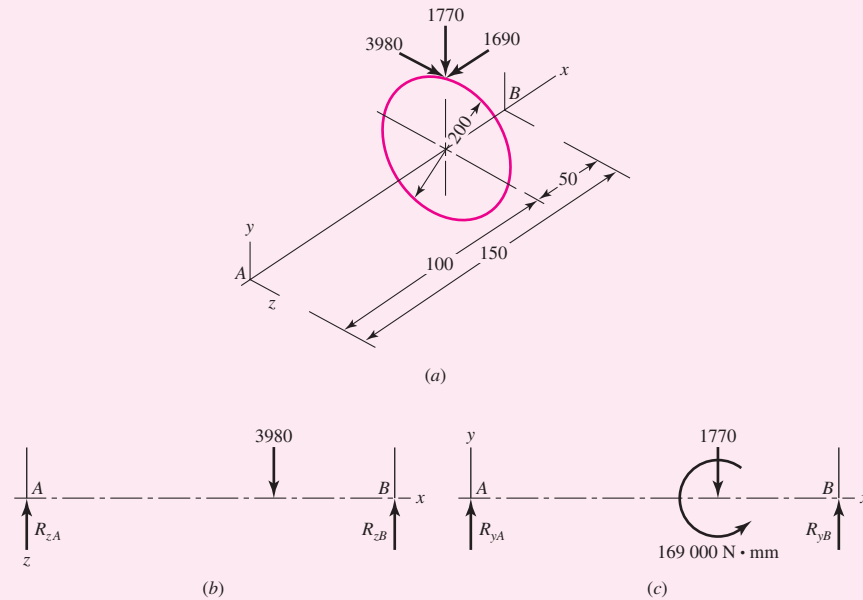
Solution The reactions in the xz plane from Fig. 11-18b are

$$R_{zA} = \frac{3980(50)}{150} = 1327 \text{ N}$$

$$R_{zB} = \frac{3980(100)}{150} = 2653 \text{ N}$$

Figure 11-18

Essential geometry of helical gear and shaft. Length dimensions in mm, loads in N, couple in N · mm. (a) Sketch (not to scale) showing thrust, radial, and tangential forces. (b) Forces in xz plane. (c) Forces in xy plane.



The reactions in the xy plane from Fig. 11-18c are

$$R_{yA} = \frac{1770(50)}{150} + \frac{169\,000}{150} = 1716.7 = 1717 \text{ N}$$

$$R_{yB} = \frac{1770(100)}{150} - \frac{169\,000}{150} = 53.3 \text{ N}$$

The radial loads F_{rA} and F_{rB} are the vector additions of R_{yA} and R_{zA} , and R_{yB} and R_{zB} , respectively:

$$F_{rA} = (R_{zA}^2 + R_{yA}^2)^{1/2} = (1327^2 + 1717^2)^{1/2} = 2170 \text{ N}$$

$$F_{rB} = (R_{zB}^2 + R_{yB}^2)^{1/2} = (2653^2 + 53.3^2)^{1/2} = 2654 \text{ N}$$

Trial 1: We will use $K_A = K_B = 1.5$ to start. From Table 11-6, noting that $m = +1$ for direct mounting and F_{ae} to the right is positive, we write

$$\frac{0.47F_{rA}}{K_A} < ? > \frac{0.47F_{rB}}{K_B} - mF_{ae}$$

$$\frac{0.47(2170)}{1.5} < ? > \left[\frac{0.47(2654)}{1.5} - (+1)(-1690) \right]$$

$$680 < 2522$$

We use the upper set of equations in Table 11-6 to find the thrust loads:

$$F_{aA} = \frac{0.47F_{rB}}{K_B} - mF_{ae} = \frac{0.47(2654)}{1.5} - (+1)(-1690) = 2522 \text{ N}$$

$$F_{aB} = \frac{0.47F_{rB}}{K_B} = \frac{0.47(2654)}{1.5} = 832 \text{ N}$$

The dynamic equivalent loads P_A and P_B are

$$P_A = 0.4F_{rA} + K_A F_{aA} = 0.4(2170) + 1.5(2522) = 4651 \text{ N}$$

$$P_B = F_{rB} = 2654 \text{ N}$$

From Fig. 11–16 for 1050 rev/min at 55°C, $f_T = 1.31$. From Fig. 11–17, $f_v = 1.01$. For use in Eq. (11–16), $a_{3l} = f_T f_v = 1.31(1.01) = 1.32$. The catalog basic load rating corresponding to the load–life–reliability goals is given by Eq. (11–17). Estimate R_D as $\sqrt{0.99} = 0.995$ for each bearing. For bearing A, from Eq. (11–17) the catalog entry C_{10} should equal or exceed

$$C_{10} = (1)(4651) \left[\frac{5000(1050)60}{(4.48)1.32(1 - 0.995)^{2/3}90(10^6)} \right]^{3/10} = 11\,466 \text{ N}$$

From Fig. 11–14, tentatively select type TS 15100 cone and 15245 cup, which will work: $K_A = 1.67$, $C_{10} = 12\,100 \text{ N}$.

For bearing B, from Eq. (11–17), the catalog entry C_{10} should equal or exceed

$$C_{10} = (1)2654 \left[\frac{5000(1050)60}{(4.48)1.32(1 - 0.995)^{2/3}90(10^6)} \right]^{3/10} = 6543 \text{ N}$$

Tentatively select the bearing identical to bearing A, which will work: $K_B = 1.67$, $C_{10} = 12\,100 \text{ N}$.

Trial 2: Use $K_A = K_B = 1.67$ from tentative bearing selection. The sense of the previous inequality $680 < 2521$ is still the same, so the same equations apply:

$$F_{aA} = \frac{0.47F_{rB}}{K_B} - mF_{ae} = \frac{0.47(2654)}{1.67} - (+1)(-1690) = 2437 \text{ N}$$

$$F_{aB} = \frac{0.47F_{rB}}{K_B} = \frac{0.47(2654)}{1.67} = 747 \text{ N}$$

$$P_A = 0.4F_{rA} + K_A F_{aA} = 0.4(2170) + 1.67(2437) = 4938 \text{ N}$$

$$P_B = F_{rB} = 2654 \text{ N}$$

For bearing A, from Eq. (11–17) the corrected catalog entry C_{10} should equal or exceed

$$C_{10} = (1)(4938) \left[\frac{5000(1050)60}{(4.48)1.32(1 - 0.995)^{2/3}90(10^6)} \right]^{3/10} = 12\,174 \text{ N}$$

Although this catalog entry exceeds slightly the tentative selection for bearing A, we will keep it since the reliability of bearing B exceeds 0.995. In the next section we will quantitatively show that the combined reliability of bearing A and B will exceed the reliability goal of 0.99.

For bearing B, $P_B = F_{rB} = 2654 \text{ N}$. From Eq. (11–17),

$$C_{10} = (1)2654 \left[\frac{5000(1050)60}{(4.48)1.32(1 - 0.995)^{2/3}90(10^6)} \right]^{3/10} = 6543 \text{ N}$$

Select cone and cup 15100 and 15245, respectively, for both bearing A and B. Note from Fig. 11–14 the effective load center is located at $a = -5.8 \text{ mm}$, that is, 5.8 mm into the cup from the back. Thus the shoulder-to-shoulder dimension should be $150 - 2(5.8) = 138.4 \text{ mm}$. Note, also, the calculation for the second bearing C_{10}

contains the same bracketed expression as for the first. For example, on the first trial C_{10} for bearing A is 11 466 N. C_{10} for bearing B can be easily calculated by

$$(C_{10})_B = \frac{(C_{10})_A}{P_A} P_B = \frac{11\,466}{4651} 2654 = 6543 \text{ N}$$

The computational effort can be simplified only after this is understood, and not until then.

11-10 Design Assessment for Selected Rolling-Contact Bearings

In textbooks machine elements typically are treated singly. This can lead the reader to the presumption that a design assessment involves only that element, in this case a rolling-contact bearing. The immediately adjacent elements (the shaft journal and the housing bore) have immediate influence on the performance. Other elements, further removed (gears producing the bearing load), also have influence. Just as some say, “If you pull on something in the environment, you find that it is attached to everything else.” This should be intuitively obvious to those involved with machinery. How, then, can one check shaft attributes that aren’t mentioned in a problem statement? Possibly, because the bearing hasn’t been designed yet (in fine detail). All this points out the necessary iterative nature of designing, a speed reducer. If power, speed, and reduction are stipulated, then gear sets can be roughed in, their sizes, geometry, and location estimated, shaft forces and moments identified, bearings tentatively selected, seals identified; the bulk is beginning to make itself evident, the housing and lubricating scheme as well as the cooling considerations become clearer, shaft overhangs and coupling accommodations appear. It is time to iterate, now addressing each element again, knowing much more about all of the others. When you have completed the necessary iterations, you will know what you need for the design assessment for the bearings. In the meantime you do as much of the design assessment as you can, avoiding bad selections, even if tentative. Always keep in mind that you eventually have to do it all in order to pronounce your completed design satisfactory.

An outline of a design assessment for a rolling contact bearing includes, at a minimum,

- Bearing reliability for the load imposed and life expected
- Shouldering on shaft and housing satisfactory
- Journal finish, diameter and tolerance compatible
- Housing finish, diameter and tolerance compatible
- Lubricant type according to manufacturer’s recommendations; lubricant paths and volume supplied to keep operating temperature satisfactory
- Preloads, if required, are supplied

Since we are focusing on rolling-contact bearings, we can address bearing reliability quantitatively, as well as shouldering. Other quantitative treatment will have to wait until the materials for shaft and housing, surface quality, and diameters and tolerances are known.

Bearing Reliability

Equation (11-6) can be solved for the reliability R_D in terms of C_{10} , the basic load rating of the selected bearing:

$$R = \exp \left(- \left\{ \frac{x_D \left(\frac{a_f F_D}{C_{10}} \right)^a - x_0}{\theta - x_0} \right\}^b \right) \quad (11-18)$$

Equation (11-7) can likewise be solved for R_D :

$$R \doteq 1 - \left\{ \frac{x_D \left(\frac{a_f F_D}{C_{10}} \right)^a - x_0}{\theta - x_0} \right\}^b \quad R \geq 0.90 \quad (11-19)$$

EXAMPLE 11-9

In Ex. 11-3, the minimum required load rating for 99 percent reliability, at $x_D = L/L_{10} = 540$, is $C_{10} = 6671 \text{ lbf} = 29.7 \text{ kN}$. From Table 11-2 a 02-40 mm deep-groove ball bearing would satisfy the requirement. If the bore in the application had to be 70 mm or larger (selecting a 02-70 mm deep-groove ball bearing), what is the resulting reliability?

Solution

From Table 11-2, for a 02-70 mm deep-groove ball bearing, $C_{10} = 61.8 \text{ kN} = 13\,888 \text{ lbf}$. Using Eq. (11-19), recalling from Ex. 11-3 that $a_f = 1.2$, $F_D = 413 \text{ lbf}$, $x_0 = 0.02$, $(\theta - x_0) = 4.439$, and $b = 1.489$, we can write

$$\text{Answer} \quad R \doteq 1 - \left\{ \frac{\left[540 \left[\frac{1.2(413)}{13\,888} \right]^3 - 0.02 \right]}{4.439} \right\}^{1.489} = 0.999\,965$$

which, as expected, is much higher than 0.99 from Ex. 11-3.

In tapered roller bearings, or other bearings for a two-parameter Weibull distribution, Eq. (11-18) becomes, for $x_0 = 0$, $\theta = 4.48$, $b = \frac{3}{2}$,

$$\begin{aligned} R &= \exp \left\{ - \left[\frac{x_D}{\theta (C_{10}/[a_f F_D])^a} \right]^b \right\} \\ &= \exp \left\{ - \left[\frac{x_D}{4.48 f_T f_v (C_{10}/[a_f F_D])^{10/3}} \right]^{3/2} \right\} \end{aligned} \quad (11-20)$$

and Eq. (11-19) becomes

$$R \doteq 1 - \left\{ \frac{x_D}{\theta [C_{10}/(a_f F_D)]^a} \right\}^b = 1 - \left\{ \frac{x_D}{4.48 f_T f_v [C_{10}/(a_f F_D)]^{10/3}} \right\}^{3/2} \quad (11-21)$$

EXAMPLE 11-10

In Ex. 11-8 bearings *A* and *B* (cone 15100 and cup 15245) have $C_{10} = 12\,100$ N. What is the reliability of the pair of bearings *A* and *B*?

Solution

The desired life x_D was $5000(1050)60/[90(10^6)] = 3.5$ rating lives. Using Eq. (11-21) for bearing *A*, where from Ex. 11-8, $F_D = P_A = 4938$ N, $f_T f_v = 1.32$, and $a_f = 1$, gives

$$R_A \doteq 1 - \left\{ \frac{3.5}{4.48(1.32) [12\,100 / (1 \times 4938)]^{10/3}} \right\}^{3/2} = 0.994\,846$$

which is less than 0.995, as expected. Using Eq. (11-21) for bearing *B* with $F_D = P_B = 2654$ N gives

$$R_B \doteq 1 - \left\{ \frac{3.5}{4.48(1.32) [12\,100 / (1 \times 2654)]^{10/3}} \right\}^{3/2} = 0.999\,769$$

Answer

The reliability of the bearing pair is

$$R = R_A R_B = 0.994\,846(0.999\,769) = 0.994\,616$$

which is greater than the overall reliability goal of 0.99. When two bearings are made identical for simplicity, or reducing the number of spares, or other stipulation, and the loading is not the same, both can be made smaller and still meet a reliability goal. If the loading is disparate, then the more heavily loaded bearing can be chosen for a reliability goal just slightly larger than the overall goal.

An additional example is useful to show what happens in cases of pure thrust loading.

EXAMPLE 11-11

Consider a constrained housing as depicted in Fig. 11-19 with two direct-mount tapered roller bearings resisting an external thrust F_{ae} of 8000 N. The shaft speed is 950 rev/min, the desired life is 10 000 h, the expected shaft diameter is approximately 1 in. The lubricant is ISO VG 150 (150 cSt at 40°C) oil with an estimated bearing operating temperature of 80°C. The reliability goal is 0.95. The application factor is appropriately $a_f = 1$.

- Choose a suitable tapered roller bearing for *A*.
- Choose a suitable tapered roller bearing for *B*.
- Find the reliabilities R_A , R_B , and R .

Solution

(a) The bearing reactions at *A* are

$$F_{rA} = F_{rB} = 0$$

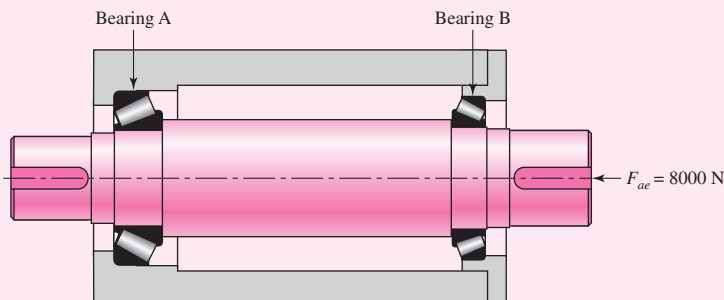
$$F_{aA} = F_{ae} = 8000 \text{ N}$$

Since bearing *B* is unloaded, we will start with $R = R_A = 0.95$. From Table 11-6,

$$\frac{0.47F_{rA}}{K_A} < ? > \frac{0.47F_{rB}}{K_B} - mF_{ae}$$

Figure 11-19

The constrained housing of
Ex. 11-11.



Noting that F_{ae} to the right is positive (Table 11-6), with direct mounting $m = +1$, we can write

$$\frac{0(0)}{K_A} < ? > \left[\frac{0.47(0)}{K_B} - (+1)(-8000) \right]$$

$$0 < 8000 \text{ N}$$

The top set of equations in Table 11-6 applies, so

$$F_{aA} = \frac{0.47(0)}{K_B} - (+1)(-8000) = 8000 \text{ N}$$

$$F_{aB} = \frac{0.47(0)}{K_B} = 0$$

If we set $K_A = 1$, we can find C_{10} in the thrust column and avoid iteration:

$$P_A = 0.4F_{rA} + K_A F_{aA} = 0.4(0) + (1)8000 = 8000 \text{ N}$$

$$P_B = F_{rB} = 0$$

The required life is

$$L_D = 10\,000(950)60 = 570(10^6) \text{ rev}$$

Under the given conditions, $f_T = 0.76$ from Fig. 11-16, and $f_v = 1.12$ from Fig. 11-17. This gives $f_T f_v = 0.76(1.12) = 0.85$. Then, from Eq. (11-17), for bearing A

$$C_{10} = a_f P \left[\frac{L_D}{4.48 f_T f_v (1 - R_D)^{2/3} 90(10^6)} \right]^{3/10}$$

$$= (1)8000 \left[\frac{570(10^6)}{4.48(0.85)(1 - 0.95)^{2/3} 90(10^6)} \right]^{3/10} = 16\,970 \text{ N}$$

Answer Figure 11-15 presents one possibility in the 1-in bore (25.4-mm) size: cone, HM88630, cup HM88610 with a thrust rating $(C_{10})_a = 17\,200 \text{ N}$.

Answer (b) Bearing B experiences no load, and the cheapest bearing of this bore size will do, including a ball or roller bearing.

(c) For Eq. (11–21), $x_D = L_D/L_{10} = 570(10^6)/90(10^6) = 6.333$. Thus the actual reliability of bearing *A*, from Eq. (11–21), is

$$\begin{aligned} \text{Answer } R &\doteq 1 - \left\{ \frac{x_D}{4.48 f_T f_v [C_{10}/(a_f F_D)]^{10/3}} \right\}^{3/2} \\ &\doteq 1 - \left\{ \frac{6.333}{4.48(0.85) [17\,200/(1 \times 8000)]^{10/3}} \right\}^{3/2} = 0.953 \end{aligned}$$

which is greater than 0.95, as one would expect. For bearing *B*,

$$\begin{aligned} \text{Answer } F_D &= P_B = 0 \\ R_B &\doteq 1 - \left[\frac{6.333}{0.85(4.48)(17\,200/0)^{10/3}} \right]^{3/2} = 1 - 0 = 1 \end{aligned}$$

as one would expect. The combined reliability of bearings *A* and *B* as a pair is

$$\text{Answer } R = R_A R_B = 0.953(1) = 0.953$$

which is greater than the reliability goal of 0.95, as one would expect.

Matters of Fit

Table 11–2 (and Fig. 11–8), which shows the rating of single-row, 02-series, deep-groove and angular-contact ball bearings, includes shoulder diameters recommended for the shaft seat of the inner ring and the shoulder diameter of the outer ring, denoted d_S and d_H , respectively. The shaft shoulder can be greater than d_S but not enough to obstruct the annulus. It is important to maintain concentricity and perpendicularity with the shaft centerline, and to that end the shoulder diameter should equal or exceed d_S . The housing shoulder diameter d_H is to be equal to or less than d_H to maintain concentricity and perpendicularity with the housing bore axis. Neither the shaft shoulder nor the housing shoulder features should allow interference with the free movement of lubricant through the bearing annulus.

In a tapered roller bearing (Fig. 11–15), the cup housing shoulder diameter should be equal to or less than D_b . The shaft shoulder for the cone should be equal to or greater than d_b . Additionally, free lubricant flow is not to be impeded by obstructing any of the annulus. In splash lubrication, common in speed reducers, the lubricant is thrown to the housing cover (ceiling) and is directed in its draining by ribs to a bearing. In direct mounting, a tapered roller bearing pumps oil from outboard to inboard. An oil passageway to the outboard side of the bearing needs to be provided. The oil returns to the sump as a consequence of bearing pump action. With an indirect mount, the oil is directed to the inboard annulus, the bearing pumping it to the outboard side. An oil passage from the outboard side to the sump has to be provided.

11–11 Lubrication

The contacting surfaces in rolling bearings have a relative motion that is both rolling and sliding, and so it is difficult to understand exactly what happens. If the relative velocity of the sliding surfaces is high enough, then the lubricant action is

hydrodynamic (see Chap. 12). *Elastohydrodynamic lubrication* (EHD) is the phenomenon that occurs when a lubricant is introduced between surfaces that are in pure rolling contact. The contact of gear teeth and that found in rolling bearings and in cam-and-follower surfaces are typical examples. When a lubricant is trapped between two surfaces in rolling contact, a tremendous increase in the pressure within the lubricant film occurs. But viscosity is exponentially related to pressure, and so a very large increase in viscosity occurs in the lubricant that is trapped between the surfaces. Leibensperger² observes that the change in viscosity in and out of contact pressure is equivalent to the difference between cold asphalt and light sewing machine oil.

The purposes of an antifriction-bearing lubricant may be summarized as follows:

- 1 To provide a film of lubricant between the sliding and rolling surfaces
- 2 To help distribute and dissipate heat
- 3 To prevent corrosion of the bearing surfaces
- 4 To protect the parts from the entrance of foreign matter

Either oil or grease may be employed as a lubricant. The following rules may help in deciding between them.

Use Grease When

1. The temperature is not over 200°F.
2. The speed is low.
3. Unusual protection is required from the entrance of foreign matter.
4. Simple bearing enclosures are desired.
5. Operation for long periods without attention is desired.

Use Oil When

1. Speeds are high.
2. Temperatures are high.
3. Oiltight seals are readily employed.
4. Bearing type is not suitable for grease lubrication.
5. The bearing is lubricated from a central supply which is also used for other machine parts.

11-12 Mounting and Enclosure

There are so many methods of mounting antifriction bearings that each new design is a real challenge to the ingenuity of the designer. The housing bore and shaft outside diameter must be held to very close limits, which of course is expensive. There are usually one or more counterboring operations, several facing operations and drilling, tapping, and threading operations, all of which must be performed on the shaft, housing, or cover plate. Each of these operations contributes to the cost of production, so that the designer, in ferreting out a trouble-free and low-cost mounting, is faced with a difficult and important problem. The various bearing manufacturers' handbooks give many mounting details in almost every design area. In a text of this nature, however, it is possible to give only the barest details.

The most frequently encountered mounting problem is that which requires one bearing at each end of a shaft. Such a design might use one ball bearing at each end, one tapered roller bearing at each end, or a ball bearing at one end and a straight roller bearing at the other. One of the bearings usually has the added function of

²R. L. Leibensperger, "When Selecting a Bearing," *Machine Design*, vol. 47, no. 8, April 3, 1975, pp. 142–147.

Figure 11-20

A common bearing mounting.

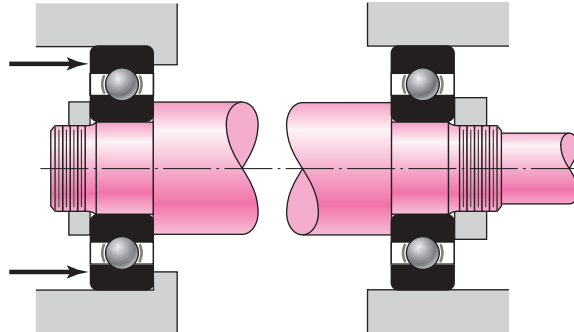
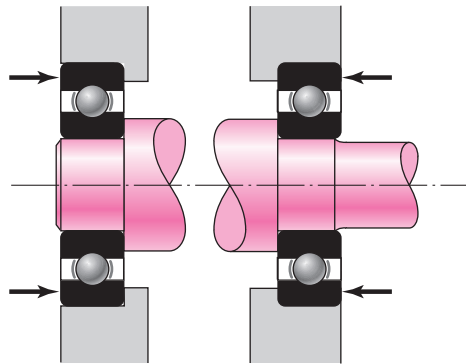


Figure 11-21

An alternative bearing mounting to that in Fig. 11-20.



positioning or axially locating the shaft. Figure 11-20 shows a very common solution to this problem. The inner rings are backed up against the shaft shoulders and are held in position by round nuts threaded onto the shaft. The outer ring of the left-hand bearing is backed up against a housing shoulder and is held in position by a device that is not shown. The outer ring of the right-hand bearing floats in the housing.

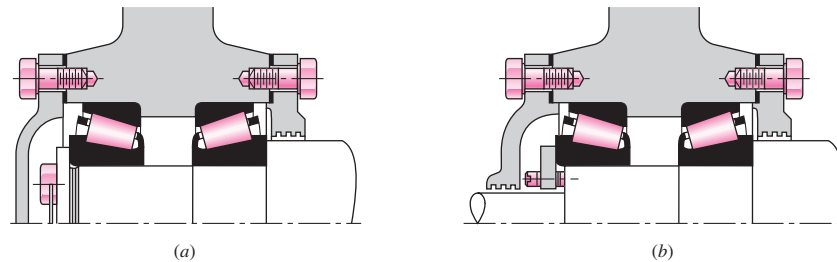
There are many variations possible on the method shown in Fig. 11-20. For example, the function of the shaft shoulder may be performed by retaining rings, by the hub of a gear or pulley, or by spacing tubes or rings. The round nuts may be replaced by retaining rings or by washers locked in position by screws, cotters, or taper pins. The housing shoulder may be replaced by a retaining ring; the outer ring of the bearing may be grooved for a retaining ring, or a flanged outer ring may be used. The force against the outer ring of the left-hand bearing is usually applied by the cover plate, but if no thrust is present, the ring may be held in place by retaining rings.

Figure 11-21 shows an alternative method of mounting in which the inner races are backed up against the shaft shoulders as before but no retaining devices are required. With this method the outer races are completely retained. This eliminates the grooves or threads, which cause stress concentration on the overhanging end, but it requires accurate dimensions in an axial direction or the employment of adjusting means. This method has the disadvantage that if the distance between the bearings is great, the temperature rise during operation may expand the shaft enough to destroy the bearings.

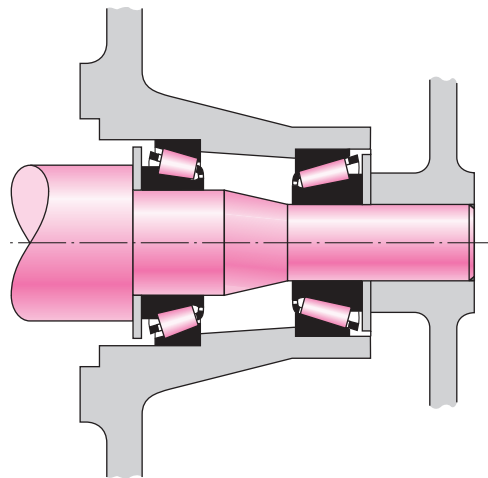
It is frequently necessary to use two or more bearings at one end of a shaft. For example, two bearings could be used to obtain additional rigidity or increased load capacity or to cantilever a shaft. Several two-bearing mountings are shown in Fig. 11-22. These may be used with tapered roller bearings, as shown, or with ball bearings. In either case it should be noted that the effect of the mounting is to preload the bearings in an axial direction.

Figure 11-22

Two-bearing mountings.
(Courtesy of The Timken
Company.)

**Figure 11-23**

Mounting for a washing-
machine spindle. (Courtesy of
The Timken Company.)

**Figure 11-24**

Arrangements of angular ball
bearings. (a) DF mounting;
(b) DB mounting; (c) DT
mounting. (Courtesy of The
Timken Company.)

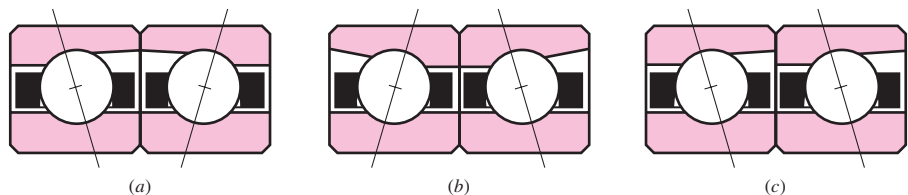


Figure 11-23 shows another two-bearing mounting. Note the use of washers against the cone backs.

When maximum stiffness and resistance to shaft misalignment is desired, pairs of angular-contact ball bearings (Fig. 11-2) are often used in an arrangement called *duplexing*. Bearings manufactured for duplex mounting have their rings ground with an offset, so that when a pair of bearings is tightly clamped together, a preload is automatically established. As shown in Fig. 11-24, three mounting arrangements are used. The face-to-face mounting, called DF, will take heavy radial loads and thrust loads from either direction. The DB mounting (back to back) has the greatest aligning stiffness and is also good for heavy radial loads and thrust loads from either direction. The tandem arrangement, called the DT mounting, is used where the thrust is always in the same direction; since the two bearings have their thrust functions in the same direction, a preload, if required, must be obtained in some other manner.

Bearings are usually mounted with the rotating ring a press fit, whether it be the inner or outer ring. The stationary ring is then mounted with a push fit. This permits the stationary ring to creep in its mounting slightly, bringing new portions of the ring into the load-bearing zone to equalize wear.

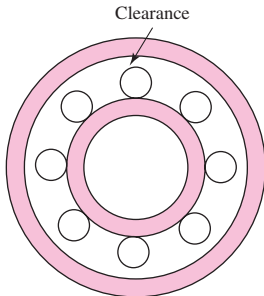


Figure 11-25

Clearance in an off-the-shelf bearing, exaggerated for clarity.

Preloading

The object of preloading is to remove the internal clearance usually found in bearings, to increase the fatigue life, and to decrease the shaft slope at the bearing. Figure 11-25 shows a typical bearing in which the clearance is exaggerated for clarity.

Preloading of straight roller bearings may be obtained by:

- 1 Mounting the bearing on a tapered shaft or sleeve to expand the inner ring
- 2 Using an interference fit for the outer ring
- 3 Purchasing a bearing with the outer ring preshrunk over the rollers

Ball bearings are usually preloaded by the axial load built in during assembly. However, the bearings of Fig. 11-24*a* and *b* are preloaded in assembly because of the differences in widths of the inner and outer rings.

It is always good practice to follow manufacturers' recommendations in determining preload, since too much will lead to early failure.

Alignment

Based on the general experience with rolling bearings as expressed in manufacturers' catalogs, the permissible misalignment in cylindrical and tapered roller bearings is limited to 0.001 rad. For spherical ball bearings, the misalignment should not exceed 0.0087 rad. But for deep-groove ball bearings, the allowable range of misalignment is 0.0035 to 0.0047 rad. The life of the bearing decreases significantly when the misalignment exceeds the allowable limits.

Additional protection against misalignment is obtained by providing the full shoulders (see Fig. 11-8) recommended by the manufacturer. Also, if there is any misalignment at all, it is good practice to provide a safety factor of around 2 to account for possible increases during assembly.

Enclosures

To exclude dirt and foreign matter and to retain the lubricant, the bearing mountings must include a seal. The three principal methods of sealings are the felt seal, the commercial seal, and the labyrinth seal (Fig. 11-26).

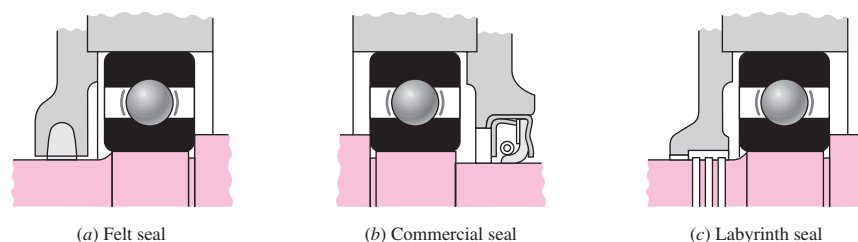
Felt seals may be used with grease lubrication when the speeds are low. The rubbing surfaces should have a high polish. Felt seals should be protected from dirt by placing them in machined grooves or by using metal stampings as shields.

The *commercial seal* is an assembly consisting of the rubbing element and, generally, a spring backing, which are retained in a sheet-metal jacket. These seals are usually made by press fitting them into a counterbored hole in the bearing cover. Since they obtain the sealing action by rubbing, they should not be used for high speeds.

The *labyrinth seal* is especially effective for high-speed installations and may be used with either oil or grease. It is sometimes used with flingers. At least three grooves should

Figure 11-26

Typical sealing methods.
(General Motors Corp. Used with permission, GM Media Archives.)



(a) Felt seal

(b) Commercial seal

(c) Labyrinth seal

be used, and they may be cut on either the bore or the outside diameter. The clearance may vary from 0.010 to 0.040 in, depending upon the speed and temperature.

PROBLEMS

Since each bearing manufacturer makes individual decisions with respect to materials, treatments, and manufacturing processes, manufacturers' experiences with bearing life distribution differ. In solving the following problems, we will use the experience of two manufacturers, tabulated as follows:

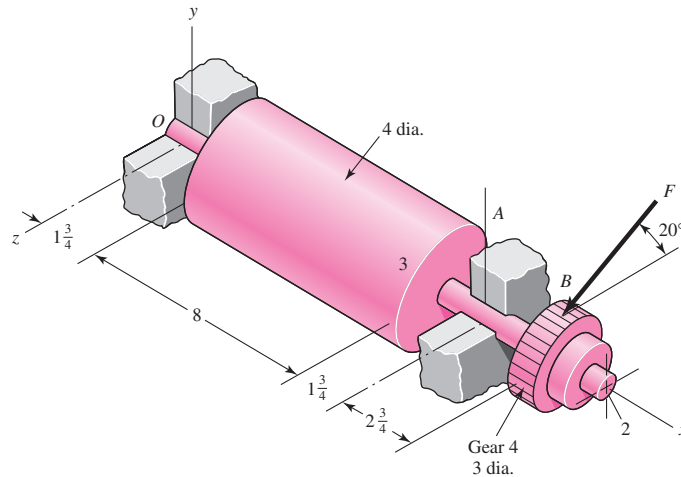
Manufacturer	Rating Life, revolutions	Weibull Parameters		
		x_0	θ	b
1	$90(10^6)$	0	4.48	1.5
2	$1(10^6)$	0.02	4.459	1.483

Tables 11–2 and 11–3 are based on manufacturer 2.

- 11-1** A certain application requires a ball bearing with the inner ring rotating, with a design life of 30 000 h at a speed of 300 rev/min. The radial load is 1.898 kN and an application factor of 1.2 is appropriate. The reliability goal is 0.90. Find the multiple of rating life required, x_D , and the catalog rating C_{10} with which to enter a bearing table. Choose a 02-series deep-groove ball bearing from Table 11–2, and estimate the reliability in use.
- 11-2** An angular-contact, inner ring rotating, 02-series ball bearing is required for an application in which the life requirement is 50 000 h at 480 rev/min. The design radial load is 610 lbf. The application factor is 1.4. The reliability goal is 0.90. Find the multiple of rating life x_D required and the catalog rating C_{10} with which to enter Table 11–2. Choose a bearing and estimate the existing reliability in service.
- 11-3** The other bearing on the shaft of Prob. 11–2 is to be a 03-series cylindrical roller bearing with inner ring rotating. For a 1650-lbf radial load, find the catalog rating C_{10} with which to enter Table 11–3. The reliability goal is 0.90. Choose a bearing and estimate its reliability in use.
- 11-4** Problems 11–2 and 11–3 raise the question of the reliability of the bearing pair on the shaft. Since the combined reliabilities R is $R_1 R_2$, what is the reliability of the two bearings (probability that either or both will not fail) as a result of your decisions in Probs. 11–2 and 11–3? What does this mean in setting reliability goals for each of the bearings of the pair on the shaft?
- 11-5** Combine Probs. 11–2 and 11–3 for an overall reliability of $R = 0.90$. Reconsider your selections, and meet this overall reliability goal.
- 11-6** An 02-series ball bearing is to be selected to carry a radial load of 8 kN and a thrust load of 4 kN. The desired life L_D is to be 5000 h with an inner-ring rotation rate of 900 rev/min. What is the basic load rating that should be used in selecting a bearing for a reliability goal of 0.90?
- 11-7** The bearing of Prob. 11–6 is to be sized to have a reliability of 0.96. What basic load rating should be used in selecting the bearing?
- 11-8** A straight (cylindrical) roller bearing is subjected to a radial load of 12 kN. The life is to be 4000 h at a speed of 750 rev/min and exhibit a reliability of 0.90. What basic load rating should be used in selecting the bearing from a catalog of manufacturer 2?

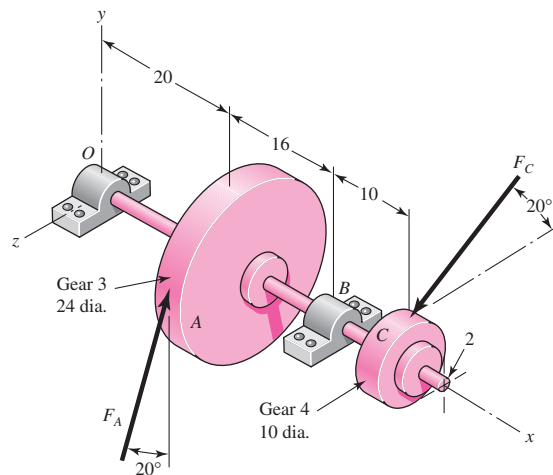
- 11-9** Shown in the figure is a gear-driven squeeze roll that mates with an idler roll, below. The roll is designed to exert a normal force of 30 lbf/in of roll length and a pull of 24 lbf/in on the material being processed. The roll speed is 300 rev/min, and a design life of 30 000 h is desired. Use an application factor of 1.2, and select a pair of angular-contact 02-series ball bearings from Table 11-2 to be mounted at O and A. Use the same size bearings at both locations and a combined reliability of at least 0.92.

Problem 11-9
Idler roll is below powered roll.
Dimensions in inches.



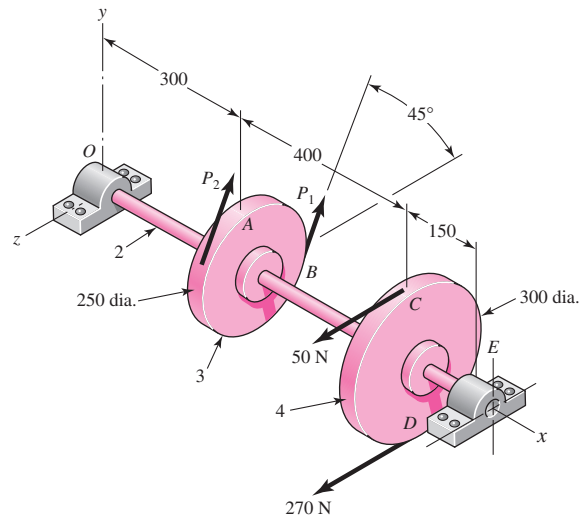
- 11-10** The figure shown is a geared countershaft with an overhanging pinion at C. Select an angular-contact ball bearing for mounting at O and a straight roller bearing for mounting at B. The force on gear A is $F_A = 600 \text{ lbf}$, and the shaft is to run at a speed of 480 rev/min. Solution of the statics problem gives force of bearings against the shaft at O as $\mathbf{R}_O = -387\mathbf{j} + 467\mathbf{k} \text{ lbf}$, and at B as $\mathbf{R}_B = 316\mathbf{j} - 1615\mathbf{k} \text{ lbf}$. Specify the bearings required, using an application factor of 1.4, a desired life of 50 000 h, and a combined reliability goal of 0.90.

Problem 11-10
Dimensions in inches.



- 11-11** The figure is a schematic drawing of a countershaft that supports two V-belt pulleys. The countershaft runs at 1200 rev/min and the bearings are to have a life of 60 kh at a combined reliability of 0.999. The belt tension on the loose side of pulley A is 15 percent of the tension on the tight side. Select deep-groove bearings from Table 11-2 for use at O and E, each to have a 25-mm bore, using an application factor of unity.

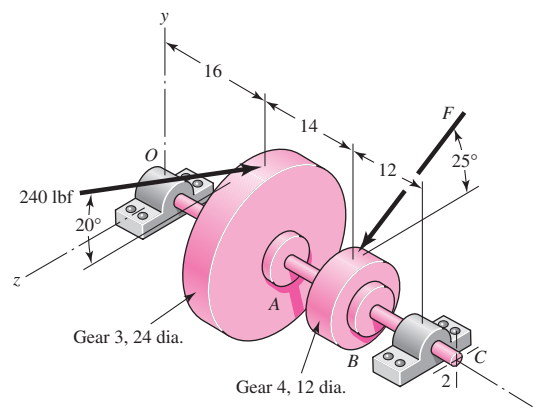
Problem 11–11
Dimensions in millimeters.



- 11-12** The bearing lubricant (513 SUS at 100°F) operating point is 135°F. A countershaft is supported by two tapered roller bearings using an indirect mounting. The radial bearing loads are 560 lbf for the left-hand bearing and 1095 for the right-hand bearing. The shaft rotates at 400 rev/min and is to have a desired life of 40 kh. Use an application factor of 1.4 and a combined reliability goal of 0.90. Using an initial $K = 1.5$, find the required radial rating for each bearing. Select the bearings from Fig. 11–15.

- 11-13** A gear-reduction unit uses the countershaft depicted in the figure. Find the two bearing reactions. The bearings are to be angular-contact ball bearings, having a desired life of 40 kh when used at 200 rev/min. Use 1.2 for the application factor and a reliability goal for the bearing pair of 0.95. Select the bearings from Table 11–2.

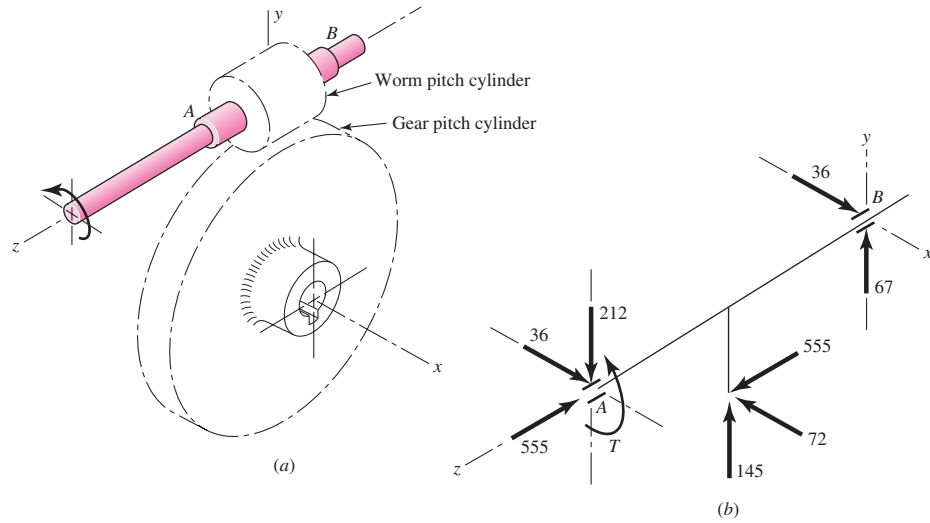
Problem 11–13
Dimensions in inches.



- 11-14** The worm shaft shown in part *a* of the figure transmits 1.35 hp at 600 rev/min. A static force analysis gave the results shown in part *b* of the figure. Bearing *A* is to be an angular-contact ball bearing mounted to take the 555-lbf thrust load. The bearing at *B* is to take only the radial load, so a straight roller bearing will be employed. Use an application factor of 1.3, a desired life of 25 kh, and a reliability goal, combined, of 0.99. Specify each bearing.

Problem 11-14

(a) Worm and worm gear; (b) force analysis of worm shaft, forces in pounds.

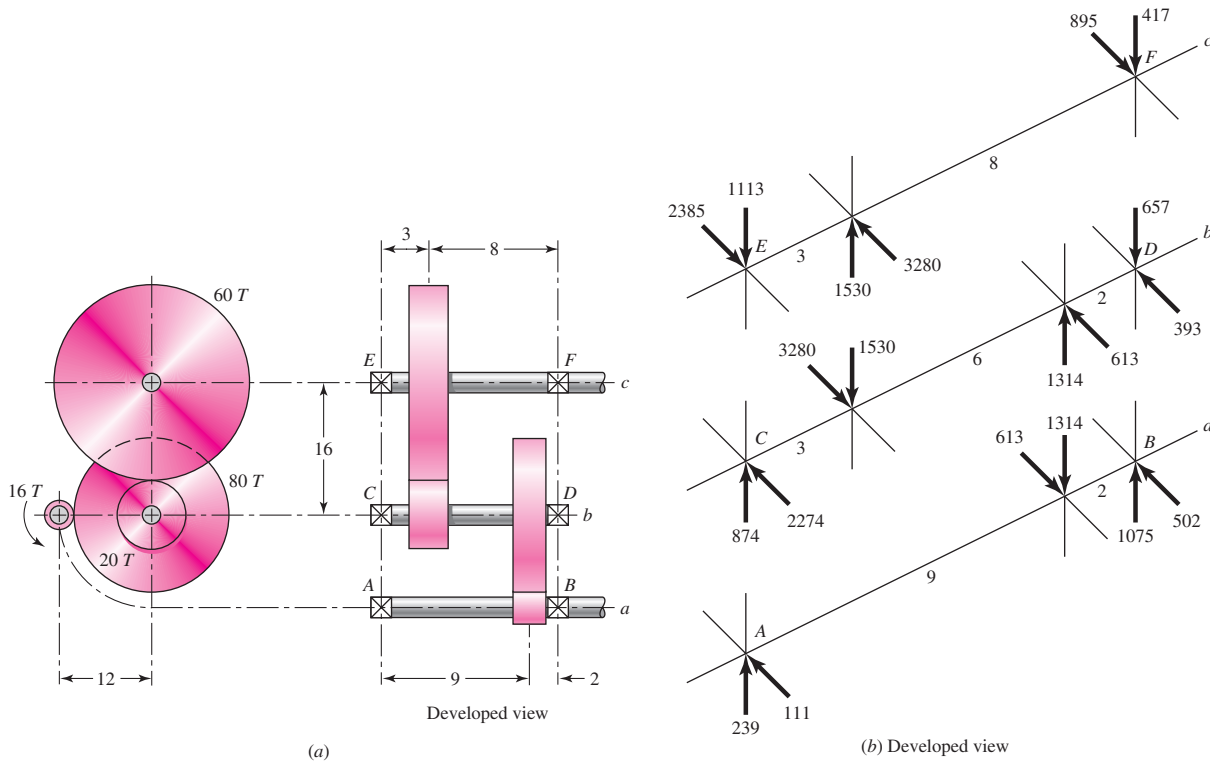


11-15

In bearings tested at 2000 rev/min with a steady radial load of 18 kN, a set of bearings showed an L_{10} life of 115 h and an L_{80} life of 600 h. The basic load rating of this bearing is 39.6 kN. Estimate the Weibull shape factor b and the characteristic life θ for a two-parameter model. This manufacturer rates ball bearings at 1 million revolutions.

11-16

A 16-tooth pinion drives the double-reduction spur-gear train in the figure. All gears have 25° pressure angles. The pinion rotates ccw at 1200 rev/min and transmits power to the gear train.



Problem 11-16

(a) Drive detail; (b) force analysis on shafts. Forces in pounds; linear dimensions in inches.

The shaft has not yet been designed, but the free bodies have been generated. The shaft speeds are 1200 rev/min, 240 rev/min, and 80 rev/min. A bearing study is commencing with a 10-kh life and a gearbox bearing ensemble reliability of 0.99. An application factor of 1.2 is appropriate. Specify the six bearings.

- 11-17** Different bearing metallurgy affects bearing life. A manufacturer reports that a particular heat treatment increases bearing life at least threefold. A bearing identical to that of Prob. 11-15 except for the heat treatment, loaded to 18 kN and run at 2000 rev/min, revealed an L_{10} life of 360 h and an L_{80} life of 2000 h. Do you agree with the manufacturer's assertion concerning increased life?
- 11-18** Estimate the remaining life in revolutions of an 02-30 mm angular-contact ball bearing already subjected to 200 000 revolutions with a radial load of 18 kN, if it is now to be subjected to a change in load to 30 kN.
- 11-19** The same 02-30 angular-contact ball bearing as in Prob. 11-18 is to be subjected to a two-step loading cycle of 4 min with a loading of 18 kN, and one of 6 min with a loading of 30 kN. This cycle is to be repeated until failure. Estimate the total life in revolutions, hours, and loading cycles.
- 11-20** The expression $F^a L = \text{constant}$ can be written using $x = L/L_{10}$, and it can be expressed as $F^a x = K$ or $\log F = (1/a) \log K - (1/a) \log x$. This is a straight line on a log-log plot, and it is the basis of Fig. 11-5. For the geometric insight provided, produce Fig. 11-5 to scale using Ex. 11-3, and

For point D : find $F_D = 1.2(413) = 495.6$ lbf, $\log F_D$, x_D , $\log x_D$, K_D

For point B : find x_B , $\log x_B$, F_B , $\log F_B$, K_B

For point A : find $F_A = F_B = C_{10}$, $\log F_A$, K_{10}

and plot to scale. On this plot, also show the line containing C_{10} , the basic load rating, of the *selected* bearing.

12

Lubrication and Journal Bearings

Chapter Outline

- 12-1** Types of Lubrication **598**
- 12-2** Viscosity **599**
- 12-3** Petroff's Equation **601**
- 12-4** Stable Lubrication **603**
- 12-5** Thick-Film Lubrication **604**
- 12-6** Hydrodynamic Theory **605**
- 12-7** Design Considerations **609**
- 12-8** The Relations of the Variables **611**
- 12-9** Steady-State Conditions in Self-Contained Bearings **625**
- 12-10** Clearance **628**
- 12-11** Pressure-Fed Bearings **630**
- 12-12** Loads and Materials **636**
- 12-13** Bearing Types **638**
- 12-14** Thrust Bearings **639**
- 12-15** Boundary-Lubricated Bearings **640**

The object of lubrication is to reduce friction, wear, and heating of machine parts that move relative to each other. A lubricant is any substance that, when inserted between the moving surfaces, accomplishes these purposes. In a sleeve bearing, a shaft, or *journal*, rotates or oscillates within a sleeve, or *bushing*, and the relative motion is sliding. In an antifriction bearing, the main relative motion is rolling. A follower may either roll or slide on the cam. Gear teeth mate with each other by a combination of rolling and sliding. Pistons slide within their cylinders. All these applications require lubrication to reduce friction, wear, and heating.

The field of application for journal bearings is immense. The crankshaft and connecting-rod bearings of an automotive engine must operate for thousands of miles at high temperatures and under varying load conditions. The journal bearings used in the steam turbines of power-generating stations are said to have reliabilities approaching 100 percent. At the other extreme there are thousands of applications in which the loads are light and the service relatively unimportant; a simple, easily installed bearing is required, using little or no lubrication. In such cases an antifriction bearing might be a poor answer because of the cost, the elaborate enclosures, the close tolerances, the radial space required, the high speeds, or the increased inertial effects. Instead, a nylon bearing requiring no lubrication, a powder-metallurgy bearing with the lubrication “built in,” or a bronze bearing with ring oiling, wick feeding, or solid-lubricant film or grease lubrication might be a very satisfactory solution. Recent metallurgy developments in bearing materials, combined with increased knowledge of the lubrication process, now make it possible to design journal bearings with satisfactory lives and very good reliabilities.

Much of the material we have studied thus far in this book has been based on fundamental engineering studies, such as statics, dynamics, the mechanics of solids, metal processing, mathematics, and metallurgy. In the study of lubrication and journal bearings, additional fundamental studies, such as chemistry, fluid mechanics, thermodynamics, and heat transfer, must be utilized in developing the material. While we shall not utilize all of them in the material to be included here, you can now begin to appreciate better how the study of mechanical engineering design is really an integration of most of your previous studies and a directing of this total background toward the resolution of a single objective.

12-1 Types of Lubrication

Five distinct forms of lubrication may be identified:

- 1 Hydrodynamic
- 2 Hydrostatic
- 3 Elastohydrodynamic
- 4 Boundary
- 5 Solid film

Hydrodynamic lubrication means that the load-carrying surfaces of the bearing are separated by a relatively thick film of lubricant, so as to prevent metal-to-metal contact, and that the stability thus obtained can be explained by the laws of fluid mechanics. Hydrodynamic lubrication does not depend upon the introduction of the lubricant under pressure, though that may occur; but it does require the existence of an adequate supply at all times. The film pressure is created by the moving surface itself pulling the lubricant into a wedge-shaped zone at a velocity sufficiently high to create the pressure necessary to separate the surfaces against the load on the bearing. Hydrodynamic lubrication is also called *full-film*, or *fluid*, *lubrication*.

Hydrostatic lubrication is obtained by introducing the lubricant, which is sometimes air or water, into the load-bearing area at a pressure high enough to separate the surfaces with a relatively thick film of lubricant. So, unlike hydrodynamic lubrication, this kind of lubrication does not require motion of one surface relative to another. We shall not deal with hydrostatic lubrication in this book, but the subject should be considered in designing bearings where the velocities are small or zero and where the frictional resistance is to be an absolute minimum.

Elastohydrodynamic lubrication is the phenomenon that occurs when a lubricant is introduced between surfaces that are in rolling contact, such as mating gears or rolling bearings. The mathematical explanation requires the Hertzian theory of contact stress and fluid mechanics.

Insufficient surface area, a drop in the velocity of the moving surface, a lessening in the quantity of lubricant delivered to a bearing, an increase in the bearing load, or an increase in lubricant temperature resulting in a decrease in viscosity—any one of these—may prevent the buildup of a film thick enough for full-film lubrication. When this happens, the highest asperities may be separated by lubricant films only several molecular dimensions in thickness. This is called *boundary lubrication*. The change from hydrodynamic to boundary lubrication is not at all a sudden or abrupt one. It is probable that a mixed hydrodynamic- and boundary-type lubrication occurs first, and as the surfaces move closer together, the boundary-type lubrication becomes predominant. The viscosity of the lubricant is not of as much importance with boundary lubrication as is the chemical composition.

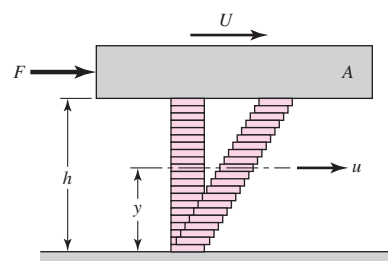
When bearings must be operated at extreme temperatures, a *solid-film lubricant* such as graphite or molybdenum disulfide must be used because the ordinary mineral oils are not satisfactory. Much research is currently being carried out in an effort, too, to find composite bearing materials with low wear rates as well as small frictional coefficients.

12-2 Viscosity

In Fig. 12-1 let a plate *A* be moving with a velocity *U* on a film of lubricant of thickness *h*. We imagine the film as composed of a series of horizontal layers and the force *F* causing these layers to deform or slide on one another just like a deck of cards. The layers in contact with the moving plate are assumed to have a velocity *U*; those in contact with the stationary surface are assumed to have a zero velocity. Intermediate layers have velocities that depend upon their distances *y* from the stationary surface. Newton's viscous effect states that the shear stress in the fluid is proportional to the rate of change of velocity with respect to *y*. Thus

$$\tau = \frac{F}{A} = \mu \frac{du}{dy} \quad (12-1)$$

| Figure 12-1



where μ is the constant of proportionality and defines *absolute viscosity*, also called *dynamic viscosity*. The derivative du/dy is the rate of change of velocity with distance and may be called the rate of shear, or the velocity gradient. The viscosity μ is thus a measure of the internal frictional resistance of the fluid. For most lubricating fluids, the rate of shear is constant, and $du/dy = U/h$. Thus, from Eq. (12–1),

$$\tau = \frac{F}{A} = \mu \frac{U}{h} \quad (12-2)$$

Fluids exhibiting this characteristic are said to be *Newtonian fluids*. The unit of viscosity in the ips system is seen to be the pound-force-second per square inch; this is the same as stress or pressure multiplied by time. The ips unit is called the *reyn*, in honor of Sir Osborne Reynolds.

The absolute viscosity is measured by the pascal-second ($\text{Pa} \cdot \text{s}$) in SI; this is the same as a Newton-second per square meter. The conversion from ips units to SI is the same as for stress. For example, multiply the absolute viscosity in reyns by 6890 to convert to units of $\text{Pa} \cdot \text{s}$.

The American Society of Mechanical Engineers (ASME) has published a list of cgs units that are not to be used in ASME documents.¹ This list results from a recommendation by the International Committee of Weights and Measures (CIPM) that the use of cgs units with special names be discouraged. Included in this list is a unit of force called the *dyne* (dyn), a unit of dynamic viscosity called the *poise* (P), and a unit of kinematic viscosity called the *stoke* (St). All of these units have been, and still are, used extensively in lubrication studies.

The poise is the cgs unit of dynamic or absolute viscosity, and its unit is the dyne-second per square centimeter ($\text{dyn} \cdot \text{s}/\text{cm}^2$). It has been customary to use the centipoise (cP) in analysis, because its value is more convenient. When the viscosity is expressed in centipoises, it is designated by Z . The conversion from cgs units to SI and ips units is as follows:

$$\mu(\text{Pa} \cdot \text{s}) = (10)^{-3} Z \text{ (cP)}$$

$$\mu(\text{reyn}) = \frac{Z \text{ (cP)}}{6.89(10)^6}$$

$$\mu(\text{mPa} \cdot \text{s}) = 6.89 \mu'(\mu\text{reyn})$$

In using ips units, the microreyn (μreyn) is often more convenient. The symbol μ' will be used to designate viscosity in μreyn such that $\mu = \mu'/(10^6)$.

The ASTM standard method for determining viscosity uses an instrument called the Saybolt Universal Viscosimeter. The method consists of measuring the time in seconds for 60 mL of lubricant at a specified temperature to run through a tube 17.6 mm in diameter and 12.25 mm long. The result is called the *kinematic viscosity*, and in the past the unit of the square centimeter per second has been used. One square centimeter per second is defined as a *stoke*. By the use of the *Hagen-Poiseuille law*, the kinematic viscosity based upon seconds Saybolt, also called *Saybolt Universal viscosity* (SUV) in seconds, is

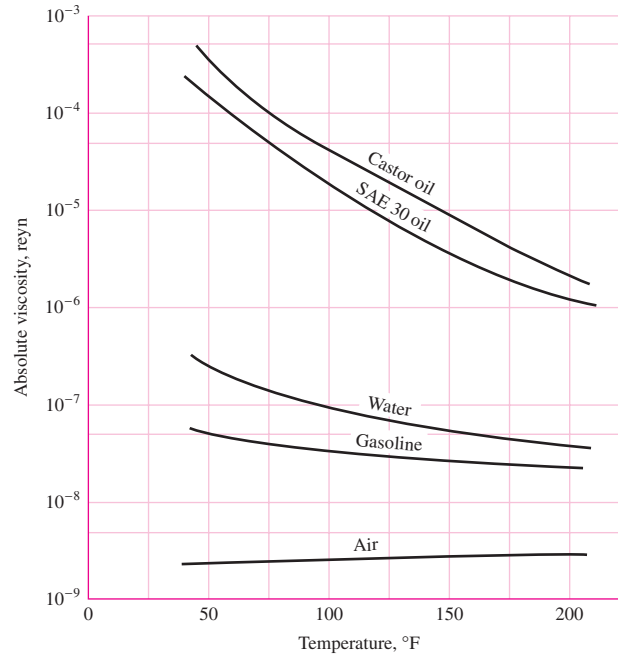
$$Z_k = \left(0.22t - \frac{180}{t} \right) \quad (12-3)$$

where Z_k is in centistokes (cSt) and t is the number of seconds Saybolt.

¹ASME *Orientation and Guide for Use of Metric Units*, 2nd ed., American Society of Mechanical Engineers, 1972, p. 13.

Figure 12-2

A comparison of the viscosities of various fluids.



In SI, the kinematic viscosity ν has the unit of the square meter per second (m^2/s), and the conversion is

$$\nu(\text{m}^2/\text{s}) = 10^{-6} Z_k (\text{cSt})$$

Thus, Eq. (12-3) becomes

$$\nu = \left(0.22t - \frac{180}{t}\right) (10^{-6}) \quad (12-4)$$

To convert to dynamic viscosity, we multiply ν by the density in SI units. Designating the density as ρ with the unit of the kilogram per cubic meter, we have

$$\mu = \rho \left(0.22t - \frac{180}{t}\right) (10^{-6}) \quad (12-5)$$

where μ is in pascal-seconds.

Figure 12-2 shows the absolute viscosity in the ips system of a number of fluids often used for lubrication purposes and their variation with temperature.

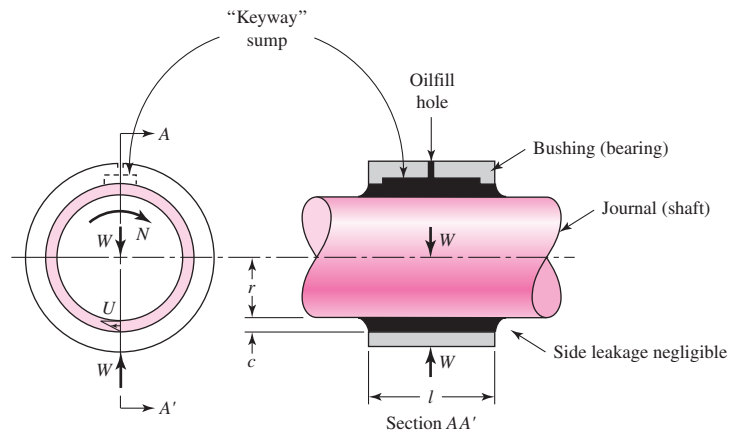
12-3 Petroff's Equation

The phenomenon of bearing friction was first explained by Petroff on the assumption that the shaft is concentric. Though we shall seldom make use of Petroff's method of analysis in the material to follow, it is important because it defines groups of dimensionless parameters and because the coefficient of friction predicted by this law turns out to be quite good even when the shaft is not concentric.

Let us now consider a vertical shaft rotating in a guide bearing. It is assumed that the bearing carries a very small load, that the clearance space is completely filled with oil, and that leakage is negligible (Fig. 12-3). We denote the radius of the shaft by r ,

Figure 12-3

Petroff's lightly loaded journal bearing consisting of a shaft journal and a bushing with an axial-groove internal lubricant reservoir. The linear velocity gradient is shown in the end view. The clearance c is several thousandths of an inch and is grossly exaggerated for presentation purposes.



the radial clearance by c , and the length of the bearing by l , all dimensions being in inches. If the shaft rotates at N rev/s, then its surface velocity is $U = 2\pi rN$ in/s. Since the shearing stress in the lubricant is equal to the velocity gradient times the viscosity, from Eq. (12-2) we have

$$\tau = \mu \frac{U}{h} = \frac{2\pi r \mu N}{c} \quad (a)$$

where the radial clearance c has been substituted for the distance h . The force required to shear the film is the stress times the area. The torque is the force times the lever arm r . Thus

$$T = (\tau A)(r) = \left(\frac{2\pi r \mu N}{c} \right) (2\pi r l)(r) = \frac{4\pi^2 r^3 l \mu N}{c} \quad (b)$$

If we now designate a small force on the bearing by W , in pounds-force, then the pressure P , in pounds-force per square inch of projected area, is $P = W/2rl$. The frictional force is fW , where f is the coefficient of friction, and so the frictional torque is

$$T = fWr = (f)(2rlP)(r) = 2r^2 f l P \quad (c)$$

Substituting the value of the torque from Eq. (c) in Eq. (b) and solving for the coefficient of friction, we find

$$f = 2\pi^2 \frac{\mu N}{P} \frac{r}{c} \quad (12-6)$$

Equation (12-6) is called *Petroff's equation* and was first published in 1883. The two quantities $\mu N/P$ and r/c are very important parameters in lubrication. Substitution of the appropriate dimensions in each parameter will show that they are dimensionless.

The *bearing characteristic number*, or the *Sommerfeld number*, is defined by the equation

$$S = \left(\frac{r}{c} \right)^2 \frac{\mu N}{P} \quad (12-7)$$

The Sommerfeld number is very important in lubrication analysis because it contains many of the parameters that are specified by the designer. Note that it is also dimensionless. The quantity r/c is called the *radial clearance ratio*. If we multiply both sides

of Eq. (12–6) by this ratio, we obtain the interesting relation

$$f \frac{r}{c} = 2\pi^2 \frac{\mu N}{P} \left(\frac{r}{c} \right)^2 = 2\pi^2 S \quad (12-8)$$

12–4 Stable Lubrication

The difference between boundary and hydrodynamic lubrication can be explained by reference to Fig. 12–4. This plot of the change in the coefficient of friction versus the bearing characteristic $\mu N/P$ was obtained by the McKee brothers in an actual test of friction.² The plot is important because it defines stability of lubrication and helps us to understand hydrodynamic and boundary, or thin-film, lubrication.

Recall Petroff's bearing model in the form of Eq. (12–6) predicts that f is proportional to $\mu N/P$, that is, a straight line from the origin in the first quadrant. On the coordinates of Fig. 12–4 the locus to the right of point C is an example. Petroff's model presumes thick-film lubrication, that is, no metal-to-metal contact, the surfaces being completely separated by a lubricant film.

The McKee abscissa was ZN/P (centipoise \times rev/min/psi) and the value of abscissa B in Fig. 12–4 was 30. The corresponding $\mu N/P$ (reyn \times rev/s/psi) is $0.33(10^{-6})$. Designers keep $\mu N/P \geq 1.7(10^{-6})$, which corresponds to $ZN/P \geq 150$. A design constraint to keep thick film lubrication is to be sure that

$$\frac{\mu N}{P} \geq 1.7(10^{-6}) \quad (a)$$

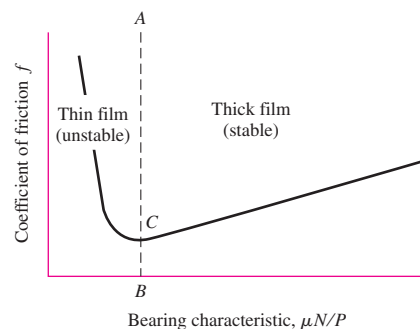
Suppose we are operating to the right of line BA and something happens, say, an increase in lubricant temperature. This results in a lower viscosity and hence a smaller value of $\mu N/P$. The coefficient of friction decreases, not as much heat is generated in shearing the lubricant, and consequently the lubricant temperature drops. Thus the region to the right of line BA defines *stable lubrication* because variations are self-correcting.

To the left of line BA , a decrease in viscosity would increase the friction. A temperature rise would ensue, and the viscosity would be reduced still more. The result would be compounded. Thus the region to the left of line BA represents *unstable lubrication*.

It is also helpful to see that a small viscosity, and hence a small $\mu N/P$, means that the lubricant film is very thin and that there will be a greater possibility of some

Figure 12-4

The variation of the coefficient of friction f with $\mu N/P$.



²S. A. McKee and T. R. McKee, "Journal Bearing Friction in the Region of Thin Film Lubrication," *SAE J.*, vol. 31, 1932, pp. (T)371–377.

metal-to-metal contact, and hence of more friction. Thus, point C represents what is probably the beginning of metal-to-metal contact as $\mu N/P$ becomes smaller.

12-5 Thick-Film Lubrication

Let us now examine the formation of a lubricant film in a journal bearing. Figure 12-5a shows a journal that is just beginning to rotate in a clockwise direction. Under starting conditions, the bearing will be dry, or at least partly dry, and hence the journal will climb or roll up the right side of the bearing as shown in Fig. 12-5a.

Now suppose a lubricant is introduced into the top of the bearing as shown in Fig. 12-5b. The action of the rotating journal is to pump the lubricant around the bearing in a clockwise direction. The lubricant is pumped into a wedge-shaped space and forces the journal over to the other side. A *minimum film thickness* h_0 occurs, not at the bottom of the journal, but displaced clockwise from the bottom as in Fig. 12-5b. This is explained by the fact that a film pressure in the converging half of the film reaches a maximum somewhere to the left of the bearing center.

Figure 12-5 shows how to decide whether the journal, under hydrodynamic lubrication, is eccentrically located on the right or on the left side of the bearing. Visualize the journal beginning to rotate. Find the side of the bearing upon which the journal tends to roll. Then, if the lubrication is hydrodynamic, mentally place the journal on the opposite side.

The nomenclature of a journal bearing is shown in Fig. 12-6. The dimension c is the *radial clearance* and is the difference in the radii of the bushing and journal. In

Figure 12-5

Formation of a film.

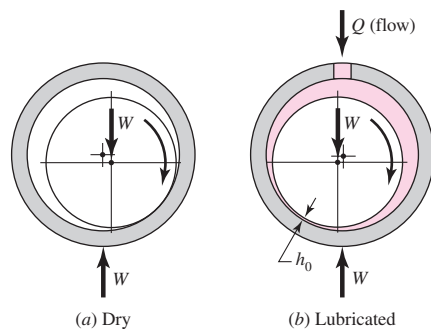


Figure 12-6

Nomenclature of a partial journal bearing.

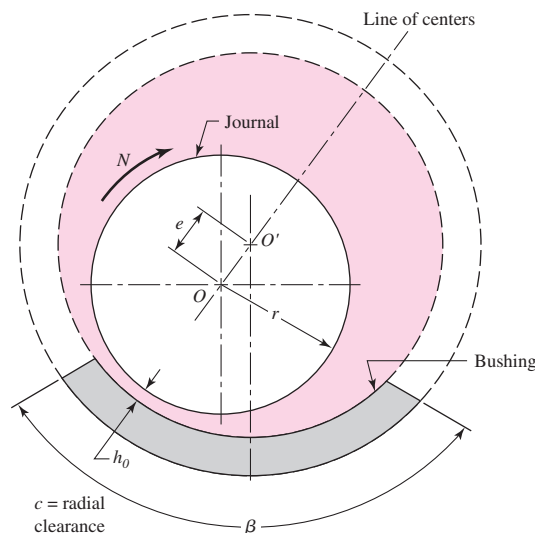


Fig. 12–6 the center of the journal is at O and the center of the bearing at O' . The distance between these centers is the *eccentricity* and is denoted by e . The *minimum film thickness* is designated by h_0 , and it occurs at the line of centers. The film thickness at any other point is designated by h . We also define an *eccentricity ratio* ϵ as

$$\epsilon = \frac{e}{c}$$

The bearing shown in the figure is known as a *partial bearing*. If the radius of the bushing is the same as the radius of the journal, it is known as a *fitted bearing*. If the bushing encloses the journal, as indicated by the dashed lines, it becomes a *full bearing*. The angle β describes the angular length of a partial bearing. For example, a 120° partial bearing has the angle β equal to 120° .

12–6 Hydrodynamic Theory

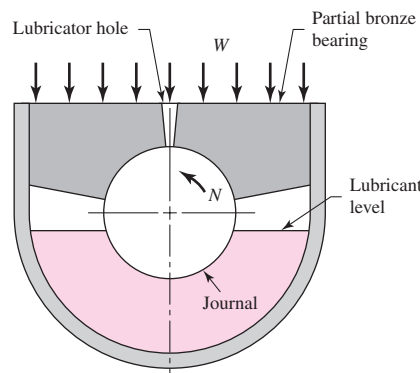
The present theory of hydrodynamic lubrication originated in the laboratory of Beauchamp Tower in the early 1880s in England. Tower had been employed to study the friction in railroad journal bearings and learn the best methods of lubricating them. It was an accident or error, during the course of this investigation, that prompted Tower to look at the problem in more detail and that resulted in a discovery that eventually led to the development of the theory.

Figure 12–7 is a schematic drawing of the journal bearing that Tower investigated. It is a partial bearing, having a diameter of 4 in, a length of 6 in, and a bearing arc of 157° , and having bath-type lubrication, as shown. The coefficients of friction obtained by Tower in his investigations on this bearing were quite low, which is now not surprising. After testing this bearing, Tower later drilled a $\frac{1}{2}$ -in-diameter lubricator hole through the top. But when the apparatus was set in motion, oil flowed out of this hole. In an effort to prevent this, a cork stopper was used, but this popped out, and so it was necessary to drive a wooden plug into the hole. When the wooden plug was pushed out too, Tower, at this point, undoubtedly realized that he was on the verge of discovery. A pressure gauge connected to the hole indicated a pressure of more than twice the unit bearing load. Finally, he investigated the bearing film pressures in detail throughout the bearing width and length and reported a distribution similar to that of Fig. 12–8.³

The results obtained by Tower had such regularity that Osborne Reynolds concluded that there must be a definite equation relating the friction, the pressure, and the

Figure 12–7

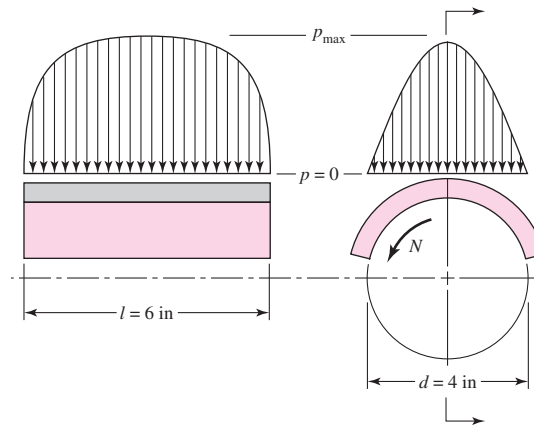
Schematic representation of the partial bearing used by Tower.



³Beauchamp Tower, “First Report on Friction Experiments,” *Proc. Inst. Mech. Eng.*, November 1883, pp. 632–666; “Second Report,” *ibid.*, 1885, pp. 58–70; “Third Report,” *ibid.*, 1888, pp. 173–205; “Fourth Report,” *ibid.*, 1891, pp. 111–140.

Figure 12-8

Approximate pressure-distribution curves obtained by Tower.



velocity. The present mathematical theory of lubrication is based upon Reynolds' work following the experiment by Tower.⁴ The original differential equation, developed by Reynolds, was used by him to explain Tower's results. The solution is a challenging problem that has interested many investigators ever since then, and it is still the starting point for lubrication studies.

Reynolds pictured the lubricant as adhering to both surfaces and being pulled by the moving surface into a narrowing, wedge-shaped space so as to create a fluid or film pressure of sufficient intensity to support the bearing load. One of the important simplifying assumptions resulted from Reynolds' realization that the fluid films were so thin in comparison with the bearing radius that the curvature could be neglected. This enabled him to replace the curved partial bearing with a flat bearing, called a *plane slider bearing*. Other assumptions made were:

- 1 The lubricant obeys Newton's viscous effect, Eq. (12-1).
- 2 The forces due to the inertia of the lubricant are neglected.
- 3 The lubricant is assumed to be incompressible.
- 4 The viscosity is assumed to be constant throughout the film.
- 5 The pressure does not vary in the axial direction.

Figure 12-9a shows a journal rotating in the clockwise direction supported by a film of lubricant of variable thickness h on a partial bearing, which is fixed. We specify that the journal has a constant surface velocity U . Using Reynolds' assumption that curvature can be neglected, we fix a right-handed xyz reference system to the stationary bearing. We now make the following additional assumptions:

- 6 The bushing and journal extend infinitely in the z direction; this means there can be no lubricant flow in the z direction.
- 7 The film pressure is constant in the y direction. Thus the pressure depends only on the coordinate x .
- 8 The velocity of any particle of lubricant in the film depends only on the coordinates x and y .

We now select an element of lubricant in the film (Fig. 12-9a) of dimensions dx , dy , and dz , and compute the forces that act on the sides of this element. As shown in Fig. 12-9b, normal forces, due to the pressure, act upon the right and left sides of the

⁴Osborne Reynolds, "Theory of Lubrication, Part I," *Phil. Trans. Roy. Soc. London*, 1886.

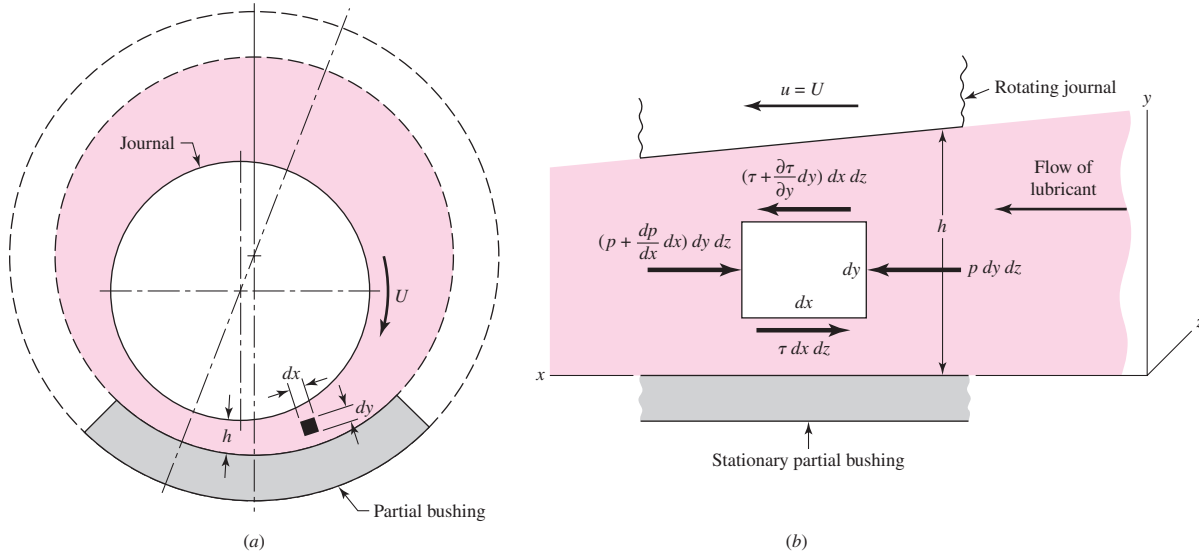


Figure 12-9

element, and shear forces, due to the viscosity and to the velocity, act upon the top and bottom sides. Summing the forces in the x direction gives

$$\sum F_x = p \, dy \, dz - \left(p + \frac{dp}{dx} dx \right) dy \, dz - \tau \, dx \, dz + \left(\tau + \frac{\partial \tau}{\partial y} dy \right) dx \, dz = 0 \quad (a)$$

This reduces to

$$\frac{dp}{dx} = \frac{\partial \tau}{\partial y} \quad (b)$$

From Eq. (12-1), we have

$$\tau = \mu \frac{\partial u}{\partial y} \quad (c)$$

where the partial derivative is used because the velocity u depends upon both x and y . Substituting Eq. (c) in Eq. (b), we obtain

$$\frac{dp}{dx} = \mu \frac{\partial^2 u}{\partial y^2} \quad (d)$$

Holding x constant, we now integrate this expression twice with respect to y . This gives

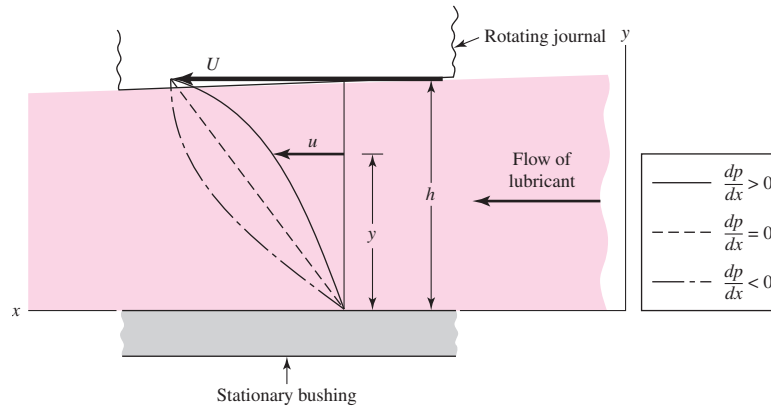
$$\begin{aligned} \frac{\partial u}{\partial y} &= \frac{1}{\mu} \frac{dp}{dx} y + C_1 \\ u &= \frac{1}{2\mu} \frac{dp}{dx} y^2 + C_1 y + C_2 \end{aligned} \quad (e)$$

Note that the act of holding x constant means that C_1 and C_2 can be functions of x . We now assume that there is no slip between the lubricant and the boundary surfaces. This gives two sets of boundary conditions for evaluating the constants C_1 and C_2 :

$$\begin{aligned} \text{At } y = 0, \quad u &= 0 \\ \text{At } y = h, \quad u &= U \end{aligned} \quad (f)$$

Figure 12-10

Velocity of the lubricant.



Notice, in the second condition, that h is a function of x . Substituting these conditions in Eq. (e) and solving for the constants gives

$$C_1 = \frac{U}{h} - \frac{h}{2\mu} \frac{dp}{dx} \quad C_2 = 0$$

or

$$u = \frac{1}{2\mu} \frac{dp}{dx} (y^2 - hy) + \frac{U}{h} y \quad (12-9)$$

This equation gives the velocity distribution of the lubricant in the film as a function of the coordinate y and the pressure gradient dp/dx . The equation shows that the velocity distribution across the film (from $y = 0$ to $y = h$) is obtained by superposing a parabolic distribution onto a linear distribution. Figure 12–10 shows the superposition of these distributions to obtain the velocity for particular values of x and dp/dx . In general, the parabolic term may be additive or subtractive to the linear term, depending upon the sign of the pressure gradient. When the pressure is maximum, $dp/dx = 0$ and the velocity is

$$u = \frac{U}{h} y \quad (g)$$

which is a linear relation.

We next define Q as the volume of lubricant flowing in the x direction per unit time. By using a width of unity in the z direction, the volume may be obtained by the expression

$$Q = \int_0^h u \, dy \quad (h)$$

Substituting the value of u from Eq. (12–9) and integrating gives

$$Q = \frac{Uh}{2} - \frac{h^3}{12\mu} \frac{dp}{dx} \quad (i)$$

The next step uses the assumption of an incompressible lubricant and states that the flow is the same for any cross section. Thus

$$\frac{dQ}{dx} = 0$$

From Eq. (i),

$$\frac{dQ}{dx} = \frac{U}{2} \frac{dh}{dx} - \frac{d}{dx} \left(\frac{h^3}{12\mu} \frac{dp}{dx} \right) = 0$$

or

$$\frac{d}{dx} \left(\frac{h^3}{\mu} \frac{dp}{dx} \right) = 6U \frac{dh}{dx} \quad (12-10)$$

which is the classical Reynolds equation for one-dimensional flow. It neglects side leakage, that is, flow in the z direction. A similar development is used when side leakage is not neglected. The resulting equation is

$$\frac{\partial}{\partial x} \left(\frac{h^3}{\mu} \frac{\partial p}{\partial x} \right) + \frac{\partial}{\partial z} \left(\frac{h^3}{\mu} \frac{\partial p}{\partial z} \right) = 6U \frac{\partial h}{\partial x} \quad (12-11)$$

There is no general analytical solution to Eq. (12-11); approximate solutions have been obtained by using electrical analogies, mathematical summations, relaxation methods, and numerical and graphical methods. One of the important solutions is due to Sommerfeld⁵ and may be expressed in the form

$$\frac{r}{c} f = \phi \left[\left(\frac{r}{c} \right)^2 \frac{\mu N}{P} \right] \quad (12-12)$$

where ϕ indicates a functional relationship. Sommerfeld found the functions for half-bearings and full bearings by using the assumption of no side leakage.

12-7 Design Considerations

We may distinguish between two groups of variables in the design of sliding bearings. In the first group are those whose values either are given or are under the control of the designer. These are:

- 1 The viscosity μ
- 2 The load per unit of projected bearing area, P
- 3 The speed N
- 4 The bearing dimensions r , c , β , and l

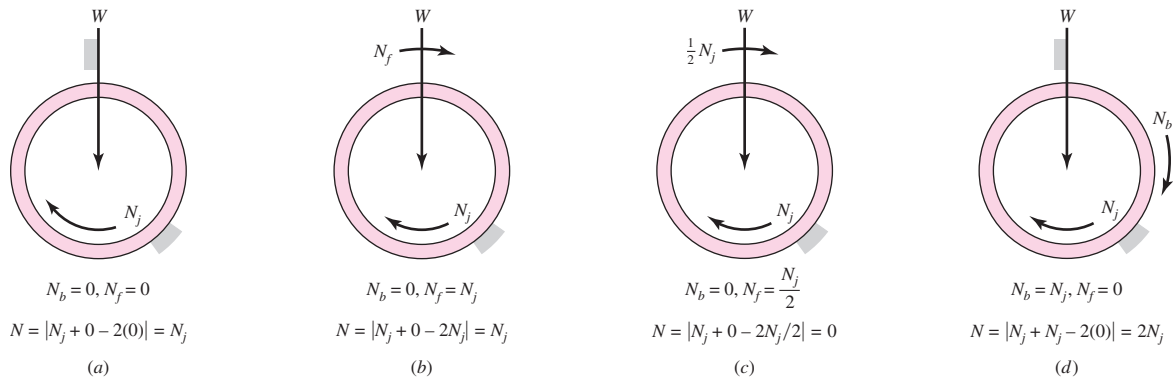
Of these four variables, the designer usually has no control over the speed, because it is specified by the overall design of the machine. Sometimes the viscosity is specified in advance, as, for example, when the oil is stored in a sump and is used for lubricating and cooling a variety of bearings. The remaining variables, and sometimes the viscosity, may be controlled by the designer and are therefore the *decisions* the designer makes. In other words, when these four decisions are made, the design is complete.

In the second group are the dependent variables. The designer cannot control these except indirectly by changing one or more of the first group. These are:

- 1 The coefficient of friction f
- 2 The temperature rise ΔT
- 3 The volume flow rate of oil Q
- 4 The minimum film thickness h_0

⁵A. Sommerfeld, "Zur Hydrodynamischen Theorie der Schmiermittel-Reibung" ("On the Hydrodynamic Theory of Lubrication"), *Z. Math. Physik*, vol. 50, 1904, pp. 97–155.

610 Mechanical Engineering Design

**Figure 12-11**

How the significant speed varies. (a) Common bearing case. (b) Load vector moves at the same speed as the journal. (c) Load vector moves at half journal speed, no load can be carried. (d) Journal and bushing move at same speed, load vector stationary, capacity halved.

This group of variables tells us how well the bearing is performing, and hence we may regard them as *performance factors*. Certain limitations on their values must be imposed by the designer to ensure satisfactory performance. These limitations are specified by the characteristics of the bearing materials and of the lubricant. The fundamental problem in bearing design, therefore, is to define satisfactory limits for the second group of variables and then to decide upon values for the first group such that these limitations are not exceeded.

Significant Angular Speed

In the next section we will examine several important charts relating key variables to the Sommerfeld number. To this point we have assumed that only the journal rotates and it is the journal rotational speed that is used in the Sommerfeld number. It has been discovered that the angular speed N that is significant to hydrodynamic film bearing performance is⁶

$$N = |N_j + N_b - 2N_f| \quad (12-13)$$

where N_j = journal angular speed, rev/s

N_b = bearing angular speed, rev/s

N_f = load vector angular speed, rev/s

When determining the Sommerfeld number for a general bearing, use Eq. (12-13) when entering N . Figure 12-11 shows several situations for determining N .

Trumpler's Design Criteria for Journal Bearings

Because the bearing assembly creates the lubricant pressure to carry a load, it reacts to loading by changing its eccentricity, which reduces the minimum film thickness h_0 until the load is carried. What is the limit of smallness of h_0 ? Close examination reveals that the moving adjacent surfaces of the journal and bushing are not smooth but consist of a series of asperities that pass one another, separated by a lubricant film. In starting a

⁶Paul Robert Trumpler, *Design of Film Bearings*, Macmillan, New York, 1966, pp. 103–119.

bearing under load from rest there is metal-to-metal contact and surface asperities are broken off, free to move and circulate with the oil. Unless a filter is provided, this debris accumulates. Such particles have to be free to tumble at the section containing the minimum film thickness without snagging in a togglelike configuration, creating additional damage and debris. Trumpler, an accomplished bearing designer, provides a throat of at least $200\ \mu\text{in}$ to pass particles from ground surfaces.⁷ He also provides for the influence of size (tolerances tend to increase with size) by stipulating

$$h_0 \geq 0.0002 + 0.000\ 04d \text{ in} \quad (a)$$

where d is the journal diameter in inches.

A lubricant is a mixture of hydrocarbons that reacts to increasing temperature by vaporizing the lighter components, leaving behind the heavier. This process (bearings have lots of time) slowly increases the viscosity of the remaining lubricant, which increases heat generation rate and elevates lubricant temperatures. This sets the stage for future failure. For light oils, Trumpler limits the maximum film temperature T_{\max} to

$$T_{\max} \leq 250^\circ\text{F} \quad (b)$$

Some oils can operate at slightly higher temperatures. Always check with the lubricant manufacturer.

A journal bearing often consists of a ground steel journal working against a softer, usually nonferrous, bushing. In starting under load there is metal-to-metal contact, abrasion, and the generation of wear particles, which, over time, can change the geometry of the bushing. The starting load divided by the projected area is limited to

$$\frac{W_{st}}{lD} \leq 300 \text{ psi} \quad (c)$$

If the load on a journal bearing is suddenly increased, the increase in film temperature in the annulus is immediate. Since ground vibration due to passing trucks, trains, and earth tremors is often present, Trumpler used a design factor of 2 or more on the running load, but not on the starting load of Eq. (c):

$$n_d \geq 2 \quad (d)$$

Many of Trumpler's designs are operating today, long after his consulting career is over; clearly they constitute good advice to the beginning designer.

12–8 The Relations of the Variables

Before proceeding to the problem of design, it is necessary to establish the relationships between the variables. Albert A. Raimondi and John Boyd, of Westinghouse Research Laboratories, used an iteration technique to solve Reynolds' equation on the digital computer.⁸ This is the first time such extensive data have been available for use by designers, and consequently we shall employ them in this book.⁹

⁷Op. cit., pp. 192–194.

⁸A. A. Raimondi and John Boyd, "A Solution for the Finite Journal Bearing and Its Application to Analysis and Design, Parts I, II, and III," *Trans. ASLE*, vol. 1, no. 1, in *Lubrication Science and Technology*, Pergamon, New York, 1958, pp. 159–209.

⁹See also the earlier companion paper, John Boyd and Albert A. Raimondi, "Applying Bearing Theory to the Analysis and Design of Journal Bearings, Part I and II," *J. Appl. Mechanics*, vol. 73, 1951, pp. 298–316.

The Raimondi and Boyd papers were published in three parts and contain 45 detailed charts and 6 tables of numerical information. In all three parts, charts are used to define the variables for length-diameter (l/d) ratios of 1:4, 1:2, and 1 and for beta angles of 60 to 360°. Under certain conditions the solution to the Reynolds equation gives negative pressures in the diverging portion of the oil film. Since a lubricant cannot usually support a tensile stress, Part III of the Raimondi-Boyd papers assumes that the oil film is ruptured when the film pressure becomes zero. Part III also contains data for the infinitely long bearing; since it has no ends, this means that there is no side leakage. The charts appearing in this book are from Part III of the papers, and are for full journal bearings ($\beta = 360^\circ$) only. Space does not permit the inclusion of charts for partial bearings. This means that you must refer to the charts in the original papers when beta angles of less than 360° are desired. The notation is very nearly the same as in this book, and so no problems should arise.

Viscosity Charts (Figs. 12–12 to 12–14)

One of the most important assumptions made in the Raimondi-Boyd analysis is that *viscosity of the lubricant is constant as it passes through the bearing*. But since work is done on the lubricant during this flow, the temperature of the oil is higher when it leaves the loading zone than it was on entry. And the viscosity charts clearly indicate that the viscosity drops off significantly with a rise in temperature. Since the analysis is based on a constant viscosity, our problem now is to determine the value of viscosity to be used in the analysis.

Some of the lubricant that enters the bearing emerges as a side flow, which carries away some of the heat. The balance of the lubricant flows through the load-bearing zone and carries away the balance of the heat generated. In determining the viscosity to be used we shall employ a temperature that is the average of the inlet and outlet temperatures, or

$$T_{\text{av}} = T_1 + \frac{\Delta T}{2} \quad (12-14)$$

where T_1 is the inlet temperature and ΔT is the temperature rise of the lubricant from inlet to outlet. Of course, the viscosity used in the analysis must correspond to T_{av} .

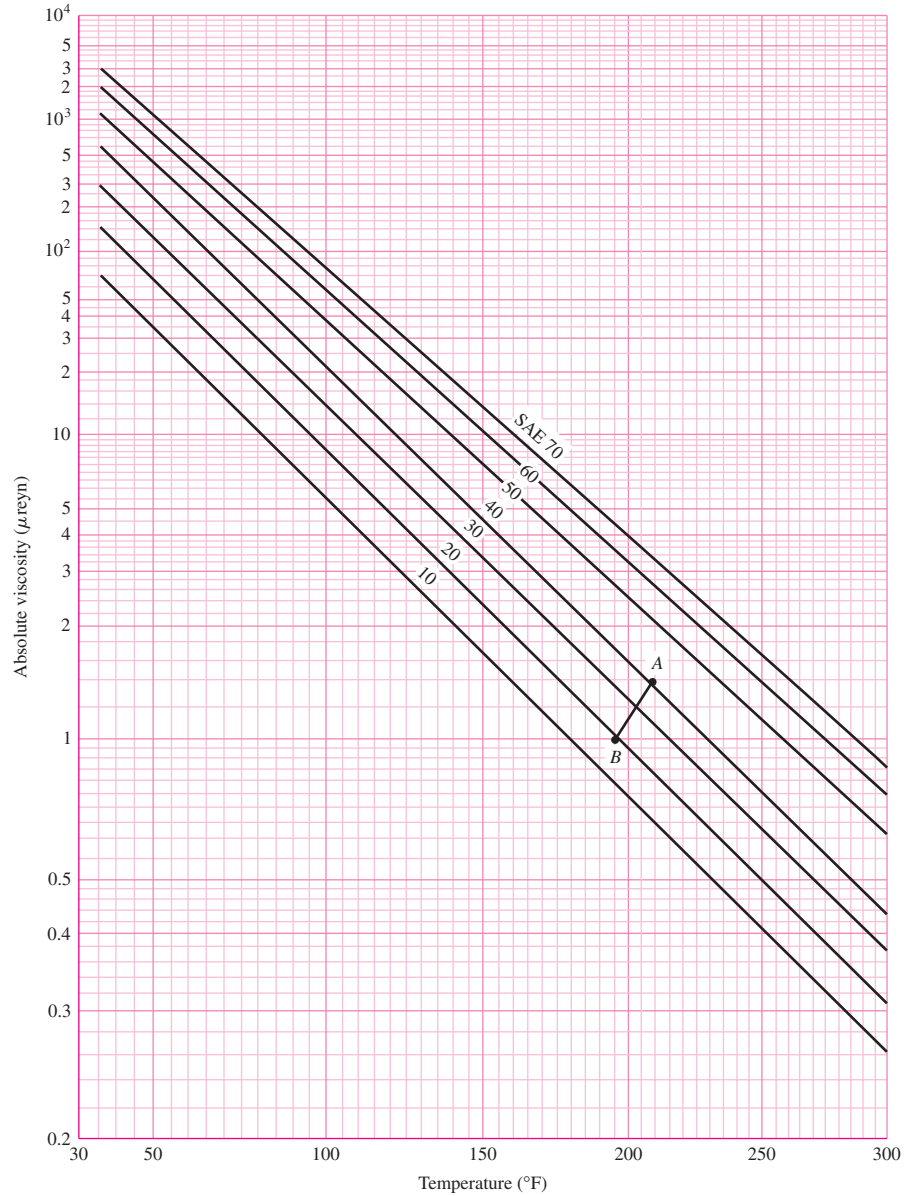
Viscosity varies considerably with temperature in a nonlinear fashion. The ordinates in Figs. 12–12 to 12–14 are not logarithmic, as the decades are of differing vertical length. These graphs represent the temperature versus viscosity functions for common grades of lubricating oils in both customary engineering and SI units. We have the temperature versus viscosity function only in graphical form, unless curve fits are developed. See Table 12–1.

One of the objectives of lubrication analysis is to determine the oil outlet temperature when the oil and its inlet temperature are specified. This is a trial-and-error type of problem. In an analysis, the temperature rise will first be estimated. This allows for the viscosity to be determined from the chart. With the value of the viscosity, the analysis is performed where the temperature rise is then computed. With this, a new estimate of the temperature rise is established. This process is continued until the estimated and computed temperatures agree.

To illustrate, suppose we have decided to use SAE 30 oil in an application in which the oil inlet temperature is $T_1 = 180^\circ\text{F}$. We begin by estimating that the temperature rise

Figure 12-12

Viscosity–temperature chart in
U.S. customary units.
(Raimondi and Boyd.)



will be $\Delta T = 30^{\circ}\text{F}$. Then, from Eq. (12-14),

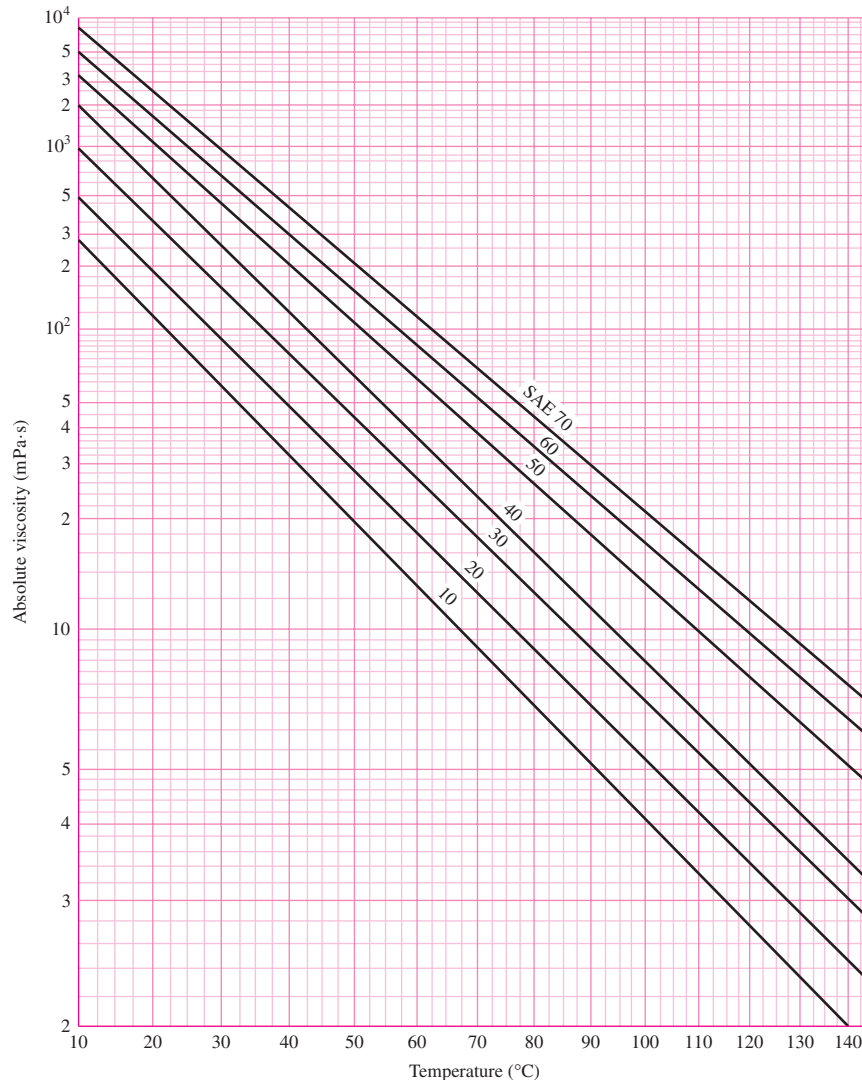
$$T_{\text{av}} = T_1 + \frac{\Delta T}{2} = 180 + \frac{30}{2} = 195^{\circ}\text{F}$$

From Fig. 12-12 we follow the SAE 30 line and find that $\mu = 1.40 \mu\text{reyn}$ at 195°F . So we use this viscosity (in an analysis to be explained in detail later) and find that the temperature rise is actually $\Delta T = 54^{\circ}\text{F}$. Thus Eq. (12-14) gives

$$T_{\text{av}} = 180 + \frac{54}{2} = 207^{\circ}\text{F}$$

Figure 12-13

Viscosity–temperature chart in
SI units. (Adapted from
Fig. 12-12.)



This corresponds to point *A* on Fig. 12-12, which is above the SAE 30 line and indicates that the viscosity used in the analysis was too high.

For a second guess, try $\mu = 1.00 \mu\text{reyn}$. Again we run through an analysis and this time find that $\Delta T = 30^\circ\text{F}$. This gives an average temperature of

$$T_{\text{av}} = 180 + \frac{30}{2} = 195^\circ\text{F}$$

and locates point *B* on Fig. 12-12.

If points *A* and *B* are fairly close to each other and on opposite sides of the SAE 30 line, a straight line can be drawn between them with the intersection locating the correct values of viscosity and average temperature to be used in the analysis. For this illustration, we see from the viscosity chart that they are $T_{\text{av}} = 203^\circ\text{F}$ and $\mu = 1.20 \mu\text{reyn}$.

Figure 12-14

Chart for multiviscosity lubricants. This chart was derived from known viscosities at two points, 100 and 210°F, and the results are believed to be correct for other temperatures.

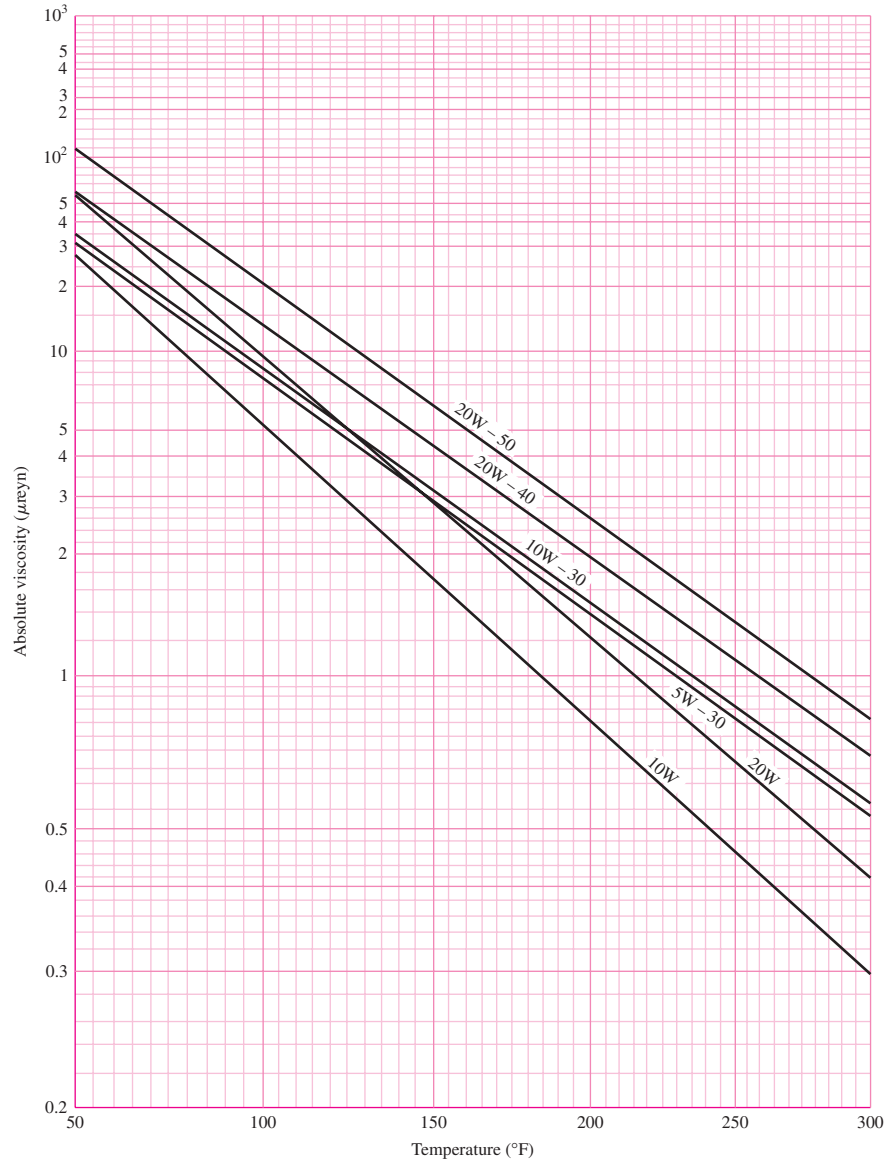


Table 12-1

Curve Fits* to Approximate the Viscosity versus Temperature Functions for SAE Grades 10 to 60

Source: A. S. Seireg and S. Dandage, "Empirical Design Procedure for the Thermodynamic Behavior of Journal Bearings," *J. Lubrication Technology*, vol. 104, April 1982, pp. 135–148.

Oil Grade, SAE	Viscosity μ_0 , reyn	Constant b , °F
10	0.0158(10 ⁻⁶)	1157.5
20	0.0136(10 ⁻⁶)	1271.6
30	0.0141(10 ⁻⁶)	1360.0
40	0.0121(10 ⁻⁶)	1474.4
50	0.0170(10 ⁻⁶)	1509.6
60	0.0187(10 ⁻⁶)	1564.0

* $\mu = \mu_0 \exp [b/(T + 95)]$, T in °F.

Figure 12-15

Polar diagram of the film–pressure distribution showing the notation used. (Raimondi and Boyd.)

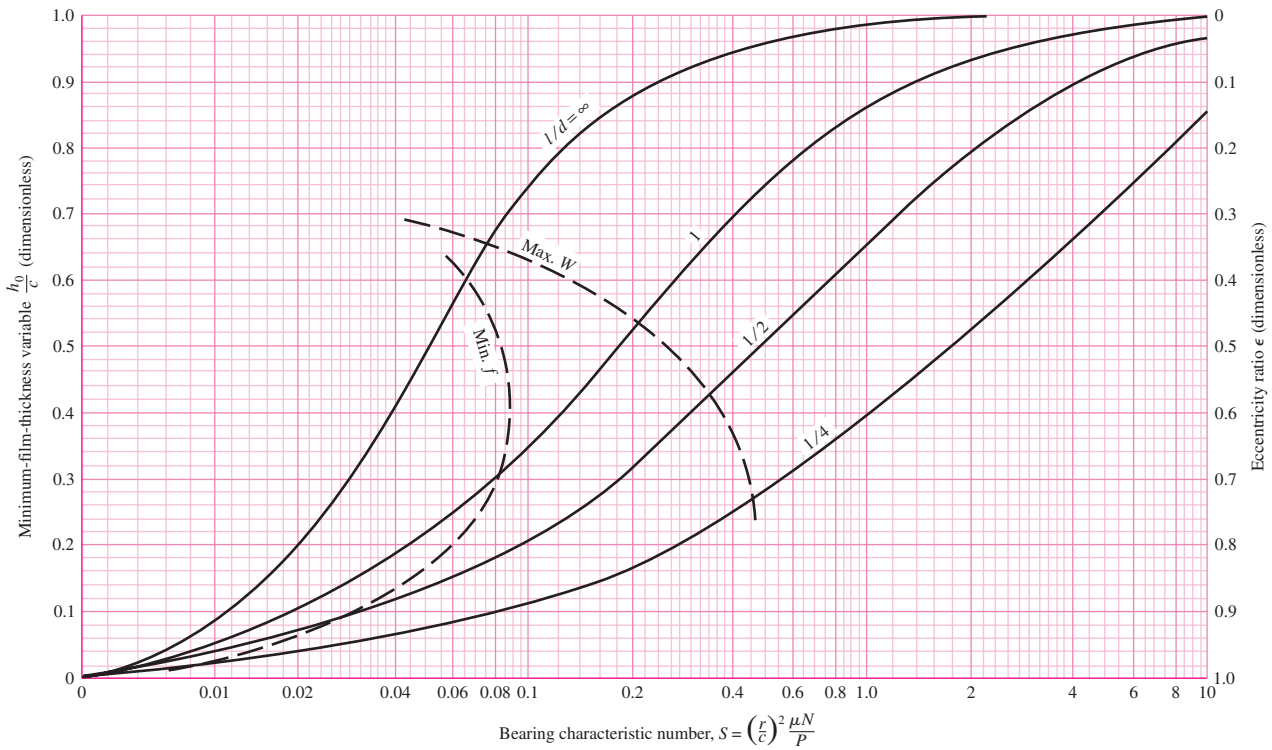
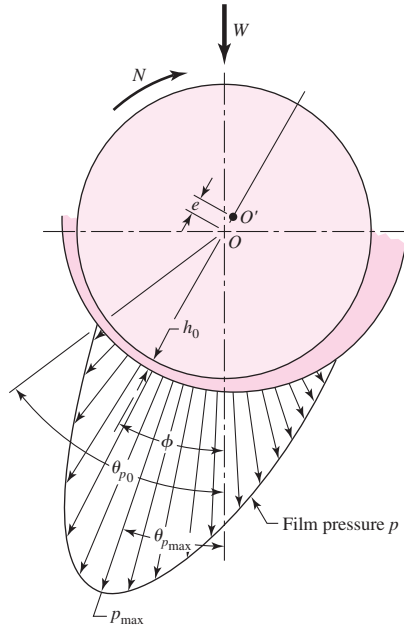
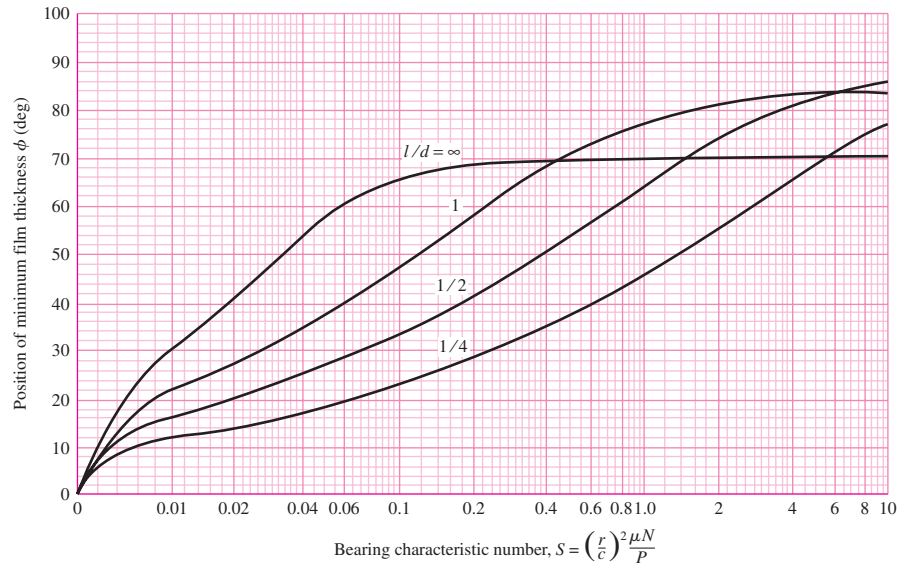


Figure 12-16

Chart for minimum film-thickness variable and eccentricity ratio. The left boundary of the zone defines the optimal h_0 for minimum friction; the right boundary is optimum h_0 for load. (Raimondi and Boyd.)

Figure 12-17

Chart for determining the position of the minimum film thickness h_0 . (Raimondi and Boyd.)



The remaining charts from Raimondi and Boyd relate several variables to the Sommerfeld number. These variables are

- Minimum film thickness (Figs. 12–16 and 12–17)
- Coefficient of friction (Fig. 12–18)
- Lubricant flow (Figs. 12–19 and 12–20)
- Film pressure (Figs. 12–21 and 12–22)

Figure 12–15 shows the notation used for the variables. We will describe the use of these curves in a series of four examples using the same set of given parameters.

Minimum Film Thickness

In Fig. 12–16, the *minimum film-thickness* variable h_0/c and *eccentricity ratio* $\epsilon = e/c$ are plotted against the Sommerfeld number S with contours for various values of l/d . The corresponding angular position of the minimum film thickness is found in Fig. 12–17.

EXAMPLE 12-1

Determine h_0 and e using the following given parameters: $\mu = 4 \mu\text{reyn}$, $N = 30 \text{ rev/s}$, $W = 500 \text{ lbf}$ (bearing load), $r = 0.75 \text{ in}$, $c = 0.0015 \text{ in}$, and $l = 1.5 \text{ in}$.

Solution

The nominal bearing pressure (in projected area of the journal) is

$$P = \frac{W}{2rl} = \frac{500}{2(0.75)1.5} = 222 \text{ psi}$$

The Sommerfeld number is, from Eq. (12–7), where $N = N_j = 30 \text{ rev/s}$,

$$S = \left(\frac{r}{c}\right)^2 \left(\frac{\mu N}{P}\right) = \left(\frac{0.75}{0.0015}\right)^2 \left[\frac{4(10^{-6})30}{222}\right] = 0.135$$

Also, $l/d = 1.50/[2(0.75)] = 1$. Entering Fig. 12–16 with $S = 0.135$ and $l/d = 1$ gives $h_0/c = 0.42$ and $\epsilon = 0.58$. The quantity h_0/c is called the *minimum film thickness*

variable. Since $c = 0.0015$ in, the minimum film thickness h_0 is

$$h_0 = 0.42(0.0015) = 0.00063 \text{ in}$$

We can find the angular location ϕ of the minimum film thickness from the chart of Fig. 12–17. Entering with $S = 0.135$ and $l/d = 1$ gives $\phi = 53^\circ$.

The eccentricity ratio is $\epsilon = e/c = 0.58$. This means the eccentricity e is

$$e = 0.58(0.0015) = 0.00087 \text{ in}$$

Note that if the journal is centered in the bushing, $e = 0$ and $h_0 = c$, corresponding to a very light (zero) load. Since $e = 0$, $\epsilon = 0$. As the load is increased the journal displaces downward; the limiting position is reached when $h_0 = 0$ and $e = c$, that is, when the journal touches the bushing. For this condition the eccentricity ratio is unity. Since $h_0 = c - e$, dividing both sides by c , we have

$$\frac{h_0}{c} = 1 - \epsilon$$

Design optima are sometimes *maximum load*, which is a load-carrying characteristic of the bearing, and sometimes *minimum parasitic power loss* or *minimum coefficient of friction*. Dashed lines appear on Fig. 12–16 for maximum load and minimum coefficient of friction, so you can easily favor one of maximum load or minimum coefficient of friction, but not both. The zone between the two dashed-line contours might be considered a desirable location for a design point.

Coefficient of Friction

The friction chart, Fig. 12–18, has the *friction variable* $(r/c)f$ plotted against Sommerfeld number S with contours for various values of the l/d ratio.

EXAMPLE 12-2

Using the parameters given in Ex. 12–1, determine the coefficient of friction, the torque to overcome friction, and the power loss to friction.

Solution

We enter Fig. 12–18 with $S = 0.135$ and $l/d = 1$ and find $(r/c)f = 3.50$. The coefficient of friction f is

$$f = 3.50 c/r = 3.50(0.0015/0.75) = 0.0070$$

The friction torque on the journal is

$$T = fWr = 0.007(500)0.75 = 2.62 \text{ lbf} \cdot \text{in}$$

The power loss in horsepower is

$$(hp)_{\text{loss}} = \frac{TN}{1050} = \frac{2.62(30)}{1050} = 0.075 \text{ hp}$$

or, expressed in Btu/s,

$$H = \frac{2\pi TN}{778(12)} = \frac{2\pi(2.62)30}{778(12)} = 0.0529 \text{ Btu/s}$$

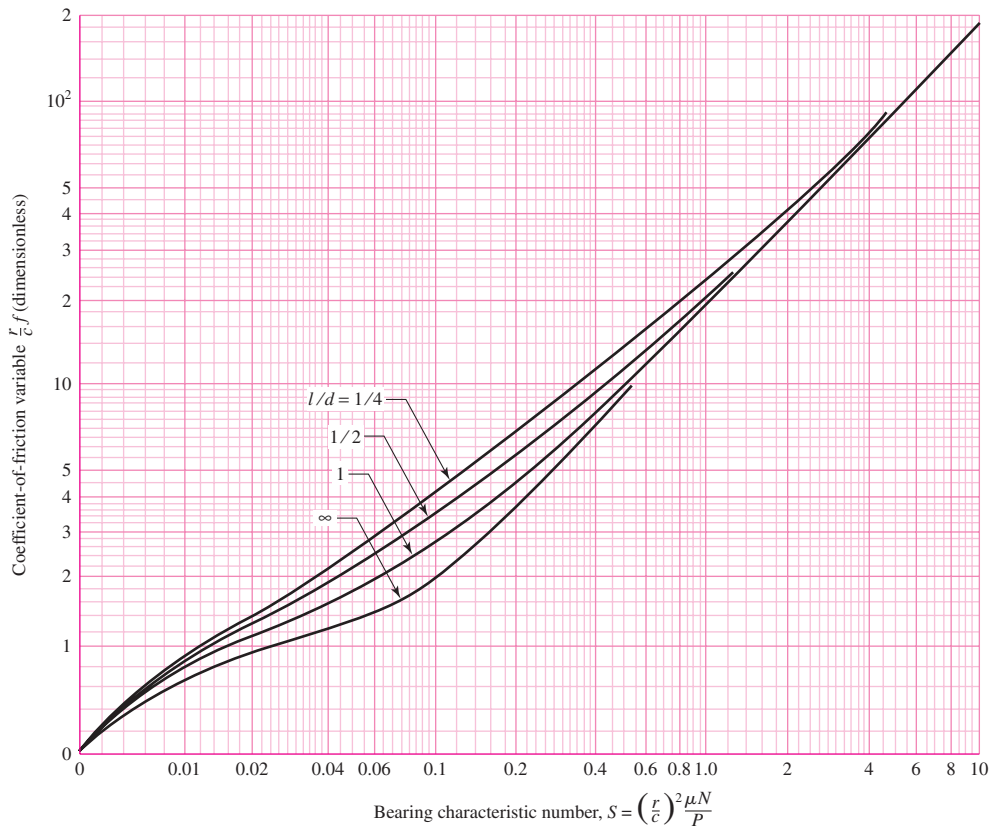


Figure 12-18

Chart for coefficient-of-friction variable; note that Petroff's equation is the asymptote. (Raimondi and Boyd.)

Lubricant Flow

Figures 12–19 and 12–20 are used to determine the lubricant flow and side flow.

EXAMPLE 12-3

Continuing with the parameters of Ex. 12–1, determine the total volumetric flow rate Q and the side flow rate Q_s .

Solution

To estimate the lubricant flow, enter Fig. 12–19 with $S = 0.135$ and $l/d = 1$ to obtain $Q/(rcNl) = 4.28$. The total volumetric flow rate is

$$Q = 4.28rcNl = 4.28(0.75)(0.0015)(30)(1.5) = 0.217 \text{ in}^3/\text{s}$$

From Fig. 12–20 we find the *flow ratio* $Q_s/Q = 0.655$ and Q_s is

$$Q_s = 0.655Q = 0.655(0.217) = 0.142 \text{ in}^3/\text{s}$$

Figure 12-19

Chart for flow variable. Note:
Not for pressure-fed bearings.
(Raimondi and Boyd.)

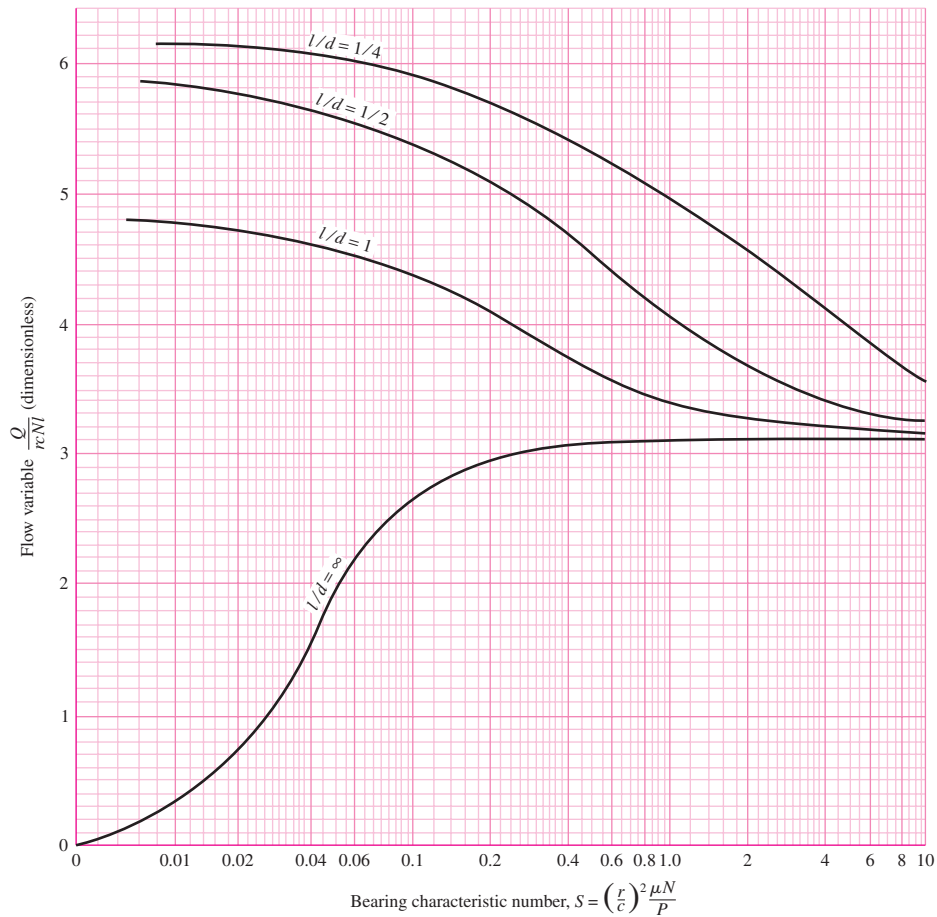
**Figure 12-20**

Chart for determining the ratio
of side flow to total flow.
(Raimondi and Boyd.)

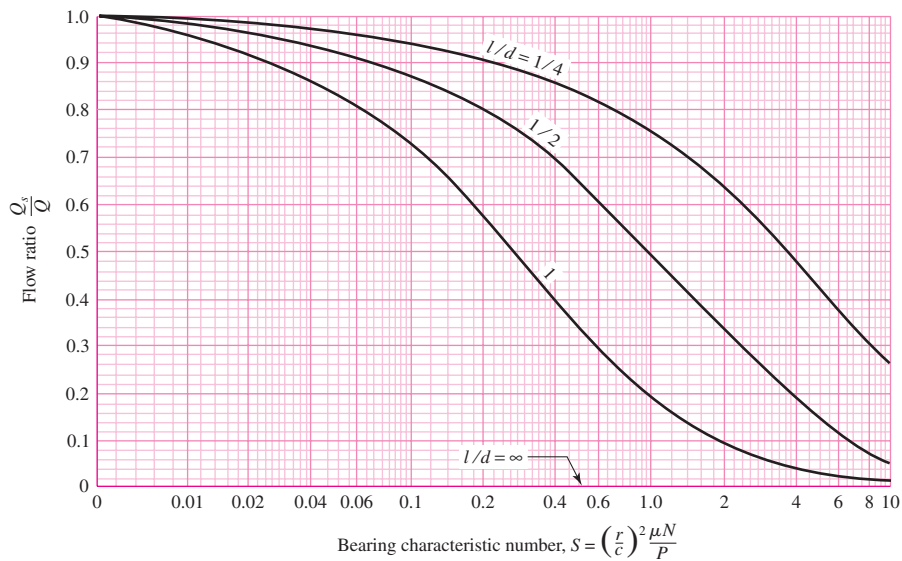
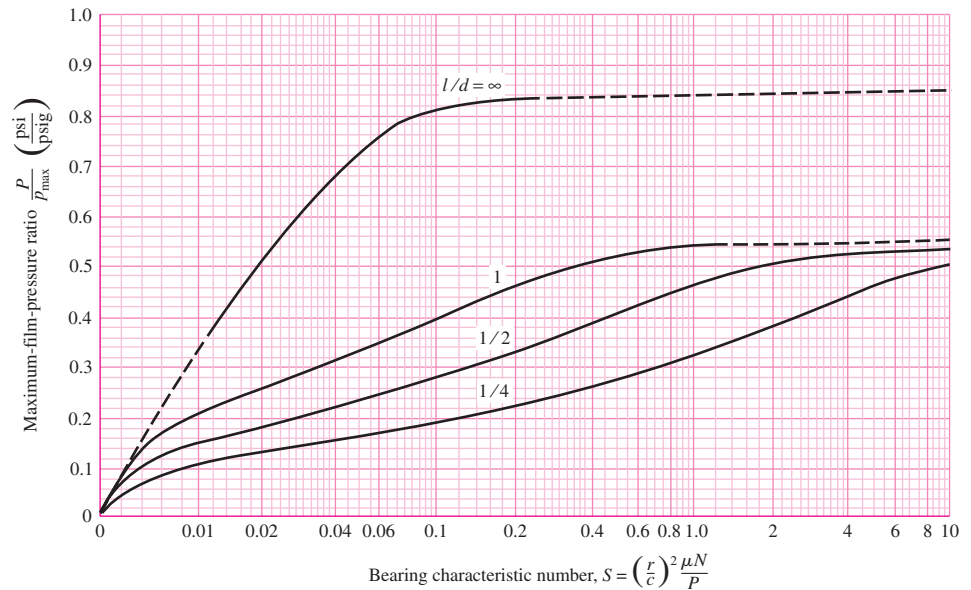


Figure 12-21

Chart for determining the maximum film pressure. Note: Not for pressure-fed bearings. (Raimondi and Boyd.)



The side leakage Q_s is from the lower part of the bearing, where the internal pressure is above atmospheric pressure. The leakage forms a fillet at the journal-bushing external junction, and it is carried by journal motion to the top of the bushing, where the internal pressure is below atmospheric pressure and the gap is much larger, to be “sucked in” and returned to the lubricant sump. That portion of side leakage that leaks away from the bearing has to be made up by adding oil to the bearing sump periodically by maintenance personnel.

Film Pressure

The maximum pressure developed in the film can be estimated by finding the pressure ratio P/p_{\max} from the chart in Fig. 12–21. The locations where the terminating and maximum pressures occur, as defined in Fig 12–15, are determined from Fig. 12–22.

EXAMPLE 12-4

Using the parameters given in Ex. 12–1, determine the maximum film pressure and the locations of the maximum and terminating pressures.

Solution

Entering Fig. 12–21 with $S = 0.135$ and $l/d = 1$, we find $P/p_{\max} = 0.42$. The maximum pressure p_{\max} is therefore

$$p_{\max} = \frac{P}{0.42} = \frac{222}{0.42} = 529 \text{ psi}$$

With $S = 0.135$ and $l/d = 1$, from Fig. 12–22, $\theta_{p_{\max}} = 18.5^\circ$ and the terminating position θ_{p_0} is 75° .

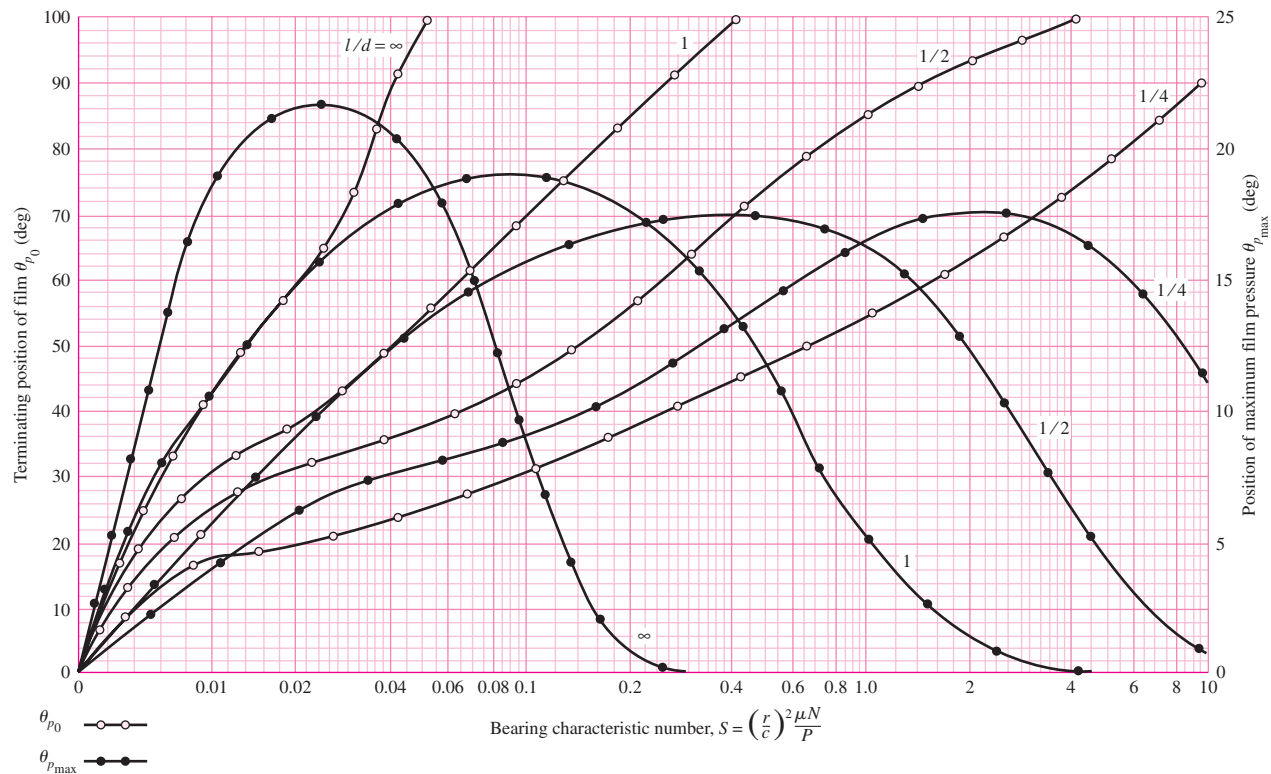
**Figure 12-22**

Chart for finding the terminating position of the lubricant film and the position of maximum film pressure. (Raimondi and Boyd.)

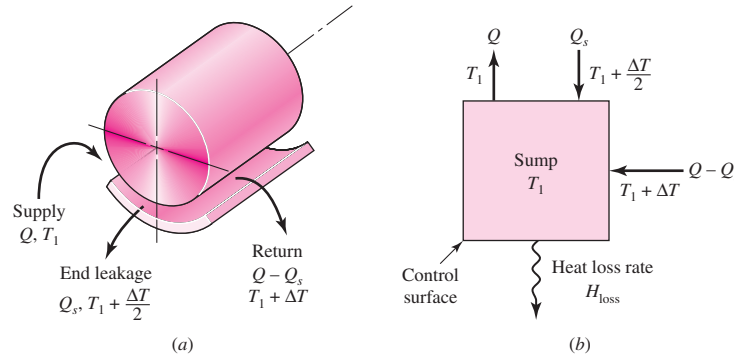
Examples 12–1 to 12–4 demonstrate how the Raimondi and Boyd charts are used. It should be clear that we do not have journal-bearing parametric relations as equations, but in the form of charts. Moreover, the examples were simple because the steady-state equivalent viscosity was given. We will now show how the average film temperature (and the corresponding viscosity) is found from energy considerations.

Lubricant Temperature Rise

The temperature of the lubricant rises until the rate at which work is done by the journal on the film through fluid shear is the same as the rate at which heat is transferred to the greater surroundings. The specific arrangement of the bearing plumbing affects the quantitative relationships. See Fig. 12–23. A lubricant sump (internal or external to the bearing housing) supplies lubricant at sump temperature T_s to the bearing annulus at temperature $T_s = T_1$. The lubricant passes once around the bushing and is delivered at a higher lubricant temperature $T_1 + \Delta T$ to the sump. Some of the lubricant leaks out of the bearing at a mixing-cup temperature of $T_1 + \Delta T/2$ and is returned to the sump. The sump may be a keyway-like groove in the bearing cap or a larger chamber up to half the bearing circumference. It can occupy “all” of the bearing cap of a split bearing. In such a bearing the side leakage occurs from the lower portion and is sucked back in, into the ruptured film arc. The sump could be well removed from the journal-bushing interface.

Figure 12-23

Schematic of a journal bearing with an external sump with cooling; lubricant makes one pass before returning to the sump.



Let

Q = volumetric oil-flow rate into the bearing, in³/s

Q_s = volumetric side-flow leakage rate out of the bearing and to the sump, in³/s

$Q - Q_s$ = volumetric oil-flow discharge from annulus to sump, in³/s

T_1 = oil inlet temperature (equal to sump temperature T_s), °F

ΔT = temperature rise in oil between inlet and outlet, °F

ρ = lubricant density, lbm/in³

C_p = specific heat capacity of lubricant, Btu/(lbm · °F)

J = Joulean heat equivalent, in · lbf/Btu

H = heat rate, Btu/s

Using the sump as a control region, we can write an enthalpy balance. Using T_1 as the datum temperature gives

$$H_{\text{loss}} = \rho C_p Q_s \Delta T / 2 + \rho C_p (Q - Q_s) \Delta T = \rho C_p Q \Delta T \left(1 - \frac{1}{2} \frac{Q_s}{Q} \right) \quad (a)$$

The thermal energy loss at steady state H_{loss} is equal to the rate the journal does work on the film is $H_{\text{loss}} = \dot{W} = 2\pi T N / J$. The torque $T = f W r$, the load in terms of pressure is $W = 2 P r l$, and multiplying numerator and denominator by the clearance c gives

$$H_{\text{loss}} = \frac{4\pi P r l N c r f}{J} \quad (b)$$

Equating Eqs. (a) and (b) and rearranging results in

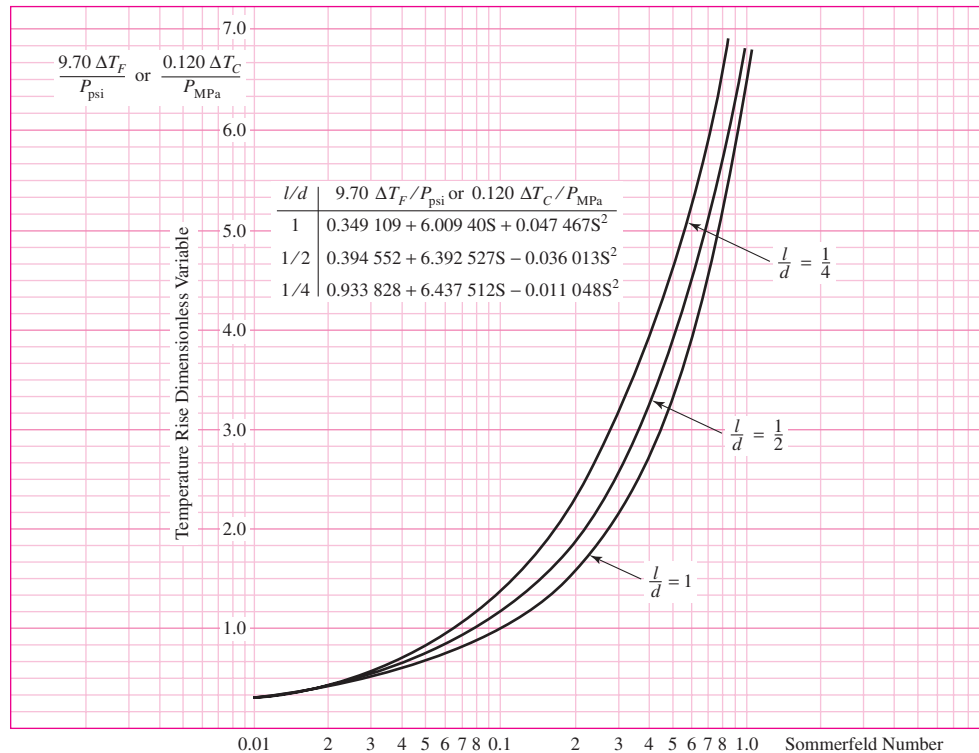
$$\frac{J \rho C_p \Delta T}{4\pi P} = \frac{r f / c}{(1 - 0.5 Q_s / Q) [Q / (r c N l)]} \quad (c)$$

For common petroleum lubricants $\rho = 0.0311$ lbm/in³, $C_p = 0.42$ Btu/(lbm · °F), and $J = 778(12) = 9336$ in · lbf/Btu; therefore the left term of Eq. (c) is

$$\frac{J \rho C_p \Delta T}{4\pi P} = \frac{9336(0.0311)0.42 \Delta T_F}{4\pi P_{\text{psi}}} = 9.70 \frac{\Delta T_F}{P_{\text{psi}}}$$

thus

$$\frac{9.70 \Delta T_F}{P_{\text{psi}}} = \frac{r f / c}{(1 - \frac{1}{2} Q_s / Q) [Q / (r c N l)]} \quad (12-15)$$

**Figure 12-24**

Figures 12–18, 12–19, and 12–20 combined to reduce iterative table look-up. (Source: Chart based on work of Raimondi and Boyd boundary condition (2), i.e., no negative lubricant pressure developed. Chart is for full journal bearing using single lubricant pass, side flow emerges with temperature rise $\Delta T/2$, thru flow emerges with temperature rise ΔT , and entire flow is supplied at datum sump temperature.)

where ΔT_F is the temperature rise in $^{\circ}\text{F}$ and P_{psi} is the bearing pressure in psi. The right side of Eq. (12–15) can be evaluated from Figs. 12–18, 12–19, and 12–20 for various Sommerfeld numbers and l/d ratios to give Fig. 12–24. It is easy to show that the left side of Eq. (12–15) can be expressed as $0.120\Delta T_C/P_{\text{MPa}}$ where ΔT_C is expressed in $^{\circ}\text{C}$ and the pressure P_{MPa} is expressed in MPa. The ordinate in Fig. 12–24 is either $9.70 \Delta T_F/P_{\text{psi}}$ or $0.120\Delta T_C/P_{\text{MPa}}$, which is not surprising since both are dimensionless in proper units and *identical in magnitude*. Since solutions to bearing problems involve iteration and reading many graphs can introduce errors, Fig. 12–24 reduces three graphs to one, a step in the proper direction.

Interpolation

According to Raimondi and Boyd, interpolation of the chart data for other l/d ratios can be done by using the equation

$$y = \frac{1}{(l/d)^3} \left[-\frac{1}{8} \left(1 - \frac{l}{d}\right) \left(1 - 2\frac{l}{d}\right) \left(1 - 4\frac{l}{d}\right) y_{\infty} + \frac{1}{3} \left(1 - 2\frac{l}{d}\right) \left(1 - 4\frac{l}{d}\right) y_1 - \frac{1}{4} \left(1 - \frac{l}{d}\right) \left(1 - 4\frac{l}{d}\right) y_{1/2} + \frac{1}{24} \left(1 - \frac{l}{d}\right) \left(1 - 2\frac{l}{d}\right) y_{1/4} \right] \quad (12-16)$$

where y is the desired variable within the interval $\infty > l/d > \frac{1}{4}$ and y_∞ , y_1 , $y_{1/2}$, and $y_{1/4}$ are the variables corresponding to l/d ratios of ∞ , 1, $\frac{1}{2}$, and $\frac{1}{4}$, respectively.

12-9 Steady-State Conditions in Self-Contained Bearings

The case in which the lubricant carries away all of the enthalpy increase from the journal-bushing pair has already been discussed. Bearings in which the warm lubricant stays within the bearing housing will now be addressed. These bearings are called *self-contained* bearings because the lubricant sump is within the bearing housing and the lubricant is cooled within the housing. These bearings are described as *pillow-block* or *pedestal* bearings. They find use on fans, blowers, pumps, and motors, for example. Integral to design considerations for these bearings is dissipating heat from the bearing housing to the surroundings at the same rate that enthalpy is being generated within the fluid film.

In a self-contained bearing the sump can be positioned as a keywaylike cavity in the bushing, the ends of the cavity not penetrating the end planes of the bushing. Film oil exits the annulus at about one-half of the relative peripheral speeds of the journal and bushing and slowly tumbles the sump lubricant, mixing with the sump contents. Since the film in the top “half” of the cap has cavitated, it contributes essentially nothing to the support of the load, but it does contribute friction. Bearing caps are in use in which the “keyway” sump is expanded peripherally to encompass the top half of the bearing. This reduces friction for the same load, but the included angle β of the bearing has been reduced to 180° . Charts for this case were included in the Raimondi and Boyd paper.

The heat given up by the bearing housing may be estimated from the equation

$$H_{\text{loss}} = \dot{h}_{\text{CR}} A (T_b - T_\infty) \quad (12-17)$$

where H_{loss} = heat dissipated, Btu/h

\dot{h}_{CR} = combined overall coefficient of radiation and convection heat transfer, Btu/(h · ft² · °F)

A = surface area of bearing housing, ft²

T_b = surface temperature of the housing, °F

T_∞ = ambient temperature, °F

The overall coefficient \dot{h}_{CR} depends on the material, surface coating, geometry, even the roughness, the temperature difference between the housing and surrounding objects, and air velocity. After Karelitz,¹⁰ and others, in ordinary industrial environments, the overall coefficient \dot{h}_{CR} can be treated as a constant. Some representative values are

$$\dot{h}_{\text{CR}} = \begin{cases} 2 \text{ Btu}/(\text{h} \cdot \text{ft}^2 \cdot ^\circ\text{F}) & \text{for still air} \\ 2.7 \text{ Btu}/(\text{h} \cdot \text{ft}^2 \cdot ^\circ\text{F}) & \text{for shaft-stirred air} \\ 5.9 \text{ Btu}/(\text{h} \cdot \text{ft}^2 \cdot ^\circ\text{F}) & \text{for air moving at 500 ft/min} \end{cases} \quad (12-18)$$

An expression similar to Eq. (12-17) can be written for the temperature difference $T_f - T_b$ between the lubricant film and the housing surface. This is possible because the bushing and housing are metal and very nearly isothermal. If one defines \bar{T}_f as the *average* film temperature (halfway between the lubricant inlet temperature T_s and the

¹⁰G. B. Karelitz, “Heat Dissipation in Self-Contained Bearings,” Trans. ASME, Vol. 64, 1942, p. 463; D. C. Lemmon and E. R. Booser, “Bearing Oil-Ring Performance,” Trans. ASME, J. Bas. Engin., Vol. 88, 1960, p. 327.

Table 12-2

Lubrication System	Conditions	Range of α
Oil ring	Moving air	1–2
	Still air	$\frac{1}{2}$ –1
Oil bath	Moving air	$\frac{1}{2}$ –1
	Still air	$\frac{1}{5}$ – $\frac{2}{5}$

outlet temperature $T_s + \Delta T$), then the following proportionality has been observed between $\bar{T}_f - T_b$ and the difference between the housing surface temperature and the ambient temperature, $T_b - T_\infty$:

$$\bar{T}_f - T_b = \alpha(T_b - T_\infty) \quad (a)$$

where \bar{T}_f is the average film temperature and α is a constant depending on the lubrication scheme and the bearing housing geometry. Equation (a) may be used to estimate the bearing housing temperature. Table 12-2 provides some guidance concerning suitable values of α . The work of Karelitz allows the broadening of the application of the charts of Raimondi and Boyd, to be applied to a variety of bearings beyond the natural circulation pillow-block bearing.

Solving Eq. (a) for T_b and substituting into Eq. (12-17) gives the bearing heat loss rate to the surroundings as

$$H_{\text{loss}} = \frac{\dot{h}_{\text{CR}} A}{1 + \alpha} (\bar{T}_f - T_\infty) \quad (12-19a)$$

and rewriting Eq. (a) gives

$$T_b = \frac{\bar{T}_f + \alpha T_\infty}{1 + \alpha} \quad (12-19b)$$

In beginning a steady-state analysis the average film temperature is unknown, hence the viscosity of the lubricant in a self-contained bearing is unknown. Finding the equilibrium temperatures is an iterative process wherein a trial average film temperature (and the corresponding viscosity) is used to compare the heat generation rate and the heat loss rate. An adjustment is made to bring these two heat rates into agreement. This can be done on paper with a tabular array to help adjust \bar{T}_f to achieve equality between heat generation and loss rates. A root-finding algorithm can be used. Even a simple one can be programmed for a digital computer.

Because of the shearing action there is a uniformly distributed energy release in the lubricant that heats the lubricant as it works its way around the bearing. The temperature is uniform in the radial direction but increases from the sump temperature T_s by an amount ΔT during the lubricant pass. The exiting lubricant mixes with the sump contents, being cooled to sump temperature. The lubricant in the sump is cooled because the bushing and housing metal are at a nearly uniform lower temperature because of heat losses by convection and radiation to the surroundings at ambient temperature T_∞ . In the usual configurations of such bearings, the bushing and housing metal temperature is approximately midway between the average film temperature $\bar{T}_f = T_s + \Delta T/2$ and the ambient temperature T_∞ . The heat generation rate H_{gen} , at steady state, is equal to the work rate from the frictional torque T . Expressing this in Btu/h requires the conversion constants 2545 Btu/(hp · h) and 1050 (lbf · in)(rev/s)/hp results in $H_{\text{gen}} = 2545 TN/1050$. Then from Eq. (b), Sec. 12-3, the torque is

$T = 4\pi^2 r^3 l \mu / c$, resulting in

$$H_{\text{gen}} = \frac{2545}{1050} \frac{4\pi^2 r^3 l \mu N}{c} = \frac{95.69 \mu N^2 l r^3}{c} \quad (b)$$

Equating this to Eq. (12–19a) and solving for \bar{T}_f gives

$$\bar{T}_f = T_{\infty} + 95.69(1 + \alpha) \frac{\mu N^2 l r^3}{\dot{h}_{\text{CR}} A c} \quad (12-20)$$

EXAMPLE 12-5

Consider a pillow-block bearing with a keyway sump, whose journal rotates at 900 rev/min in shaft-stirred air at 70°F with $\alpha = 1$. The lateral area of the bearing is 40 in². The lubricant is SAE grade 20 oil. The gravity radial load is 100 lbf and the l/d ratio is unity. The bearing has a journal diameter of 2.000 + 0.000/−0.002 in, a bushing bore of 2.002 + 0.004/−0.000 in. For a minimum clearance assembly estimate the steady-state temperatures as well as the minimum film thickness and coefficient of friction.

Solution The minimum radial clearance, c_{min} , is

$$c_{\text{min}} = \frac{2.002 - 2.000}{2} = 0.001 \text{ in}$$

$$P = \frac{W}{ld} = \frac{100}{(2)2} = 25 \text{ psi}$$

$$S = \left(\frac{r}{c}\right)^2 \frac{\mu N}{P} = \left(\frac{1}{0.001}\right)^2 \frac{\mu'(15)}{10^6(25)} = 0.6 \mu'$$

where μ' is viscosity in μreyn . The friction horsepower loss, $(\text{hp})_f$, is found as follows:

$$(\text{hp})_f = \frac{f W r N}{1050} = \frac{W N c}{1050} \frac{f r}{c} = \frac{100(900/60)0.001}{1050} \frac{f r}{c} = 0.001429 \frac{f r}{c} \text{ hp}$$

The heat generation rate H_{gen} , in Btu/h, is

$$H_{\text{gen}} = 2545(\text{hp})_f = 2545(0.001429) \frac{f r}{c} = 3.637 \frac{f r}{c} \text{ Btu/h}$$

From Eq. (12–19a) with $\dot{h}_{\text{CR}} = 2.7 \text{ Btu}/(\text{h} \cdot \text{ft}^2 \cdot ^\circ\text{F})$, the rate of heat loss to the environment H_{loss} is

$$H_{\text{loss}} = \frac{\dot{h}_{\text{CR}} A}{\alpha + 1} (\bar{T}_f - 70) = \frac{2.7(40/144)}{(1 + 1)} (\bar{T}_f - 70) = 0.375(\bar{T}_f - 70) \text{ Btu/h}$$

Build a table as follows for trial values of \bar{T}_f of 190 and 195°F:

Trial \bar{T}_f	μ'	S	fr/c	H_{gen}	H_{loss}
190	1.15	0.69	13.6	49.5	45.0
195	1.03	0.62	12.2	44.4	46.9

The temperature at which $H_{\text{gen}} = H_{\text{loss}} = 46.3$ Btu/h is 193.4°F . Rounding \bar{T}_f to 193°F we find $\mu' = 1.08$ μreyn and $S = 0.6(1.08) = 0.65$. From Fig. 12–24, $9.70\Delta T_F/P = 4.25^\circ\text{F}/\text{psi}$ and thus

$$\Delta T_F = 4.25P/9.70 = 4.25(25)/9.70 = 11.0^\circ\text{F}$$

$$T_1 = T_s = \bar{T}_f - \Delta T/2 = 193 - 11/2 = 187.5^\circ\text{F}$$

$$T_{\text{max}} = T_1 + \Delta T_F = 187.5 + 11 = 198.5^\circ\text{F}$$

From Eq. (12–19b)

$$T_b = \frac{T_f + \alpha T_\infty}{1 + \alpha} = \frac{193 + (1)70}{1 + 1} = 131.5^\circ\text{F}$$

with $S = 0.65$, the minimum film thickness from Fig. 12–16 is

$$h_0 = \frac{h_0}{c}c = 0.79(0.001) = 0.00079 \text{ in}$$

The coefficient of friction from Fig. 12–18 is

$$f = \frac{fr}{c} \frac{c}{r} = 12.8 \frac{0.001}{1} = 0.0128$$

The parasitic friction torque T is

$$T = fWr = 0.0128(100)(1) = 1.28 \text{ lbf} \cdot \text{in}$$

12–10 Clearance

In designing a journal bearing for thick-film lubrication, the engineer must select the grade of oil to be used, together with suitable values for P , N , r , c , and l . A poor selection of these or inadequate control of them during manufacture or in use may result in a film that is too thin, so that the oil flow is insufficient, causing the bearing to overheat and, eventually, fail. Furthermore, the radial clearance c is difficult to hold accurate during manufacture, and it may increase because of wear. What is the effect of an entire range of radial clearances, expected in manufacture, and what will happen to the bearing performance if c increases because of wear? Most of these questions can be answered and the design optimized by plotting curves of the performance as functions of the quantities over which the designer has control.

Figure 12–25 shows the results obtained when the performance of a particular bearing is calculated for a whole range of radial clearances and is plotted with clearance as the independent variable. The bearing used for this graph is the one of Examples 12–1 to 12–4 with SAE 20 oil at an inlet temperature of 100°F . The graph shows that if the clearance is too tight, the temperature will be too high and the minimum film thickness too low. High temperatures may cause the bearing to fail by fatigue. If the oil film is too thin, dirt particles may be unable to pass without scoring or may embed themselves in the bearing. In either event, there will be excessive wear and friction, resulting in high temperatures and possible seizing.

To investigate the problem in more detail, Table 12–3 was prepared using the two types of preferred running fits that seem to be most useful for journal-bearing design

Figure 12-25

A plot of some performance characteristics of the bearing of Exs. 12-1 to 12-4 for radial clearances of 0.0005 to 0.003 in. The bearing outlet temperature is designated T_2 . New bearings should be designed for the shaded zone, because wear will move the operating point to the right.

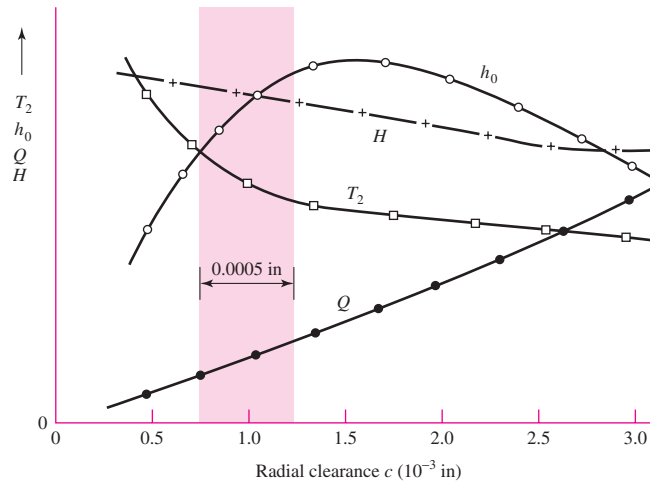


Table 12-3

Maximum, Minimum, and Average Clearances for 1.5-in-Diameter Journal Bearings Based on Type of Fit

Type of Fit	Symbol	Clearance c , in		
		Maximum	Average	Minimum
Close-running	H8/f7	0.001 75	0.001 125	0.000 5
Free-running	H9/d9	0.003 95	0.002 75	0.001 55

Table 12-4

Performance of 1.5-in-Diameter Journal Bearing with Various Clearances. (SAE 20 Lubricant, $T_1 = 100^\circ\text{F}$, $N = 30$ r/s, $W = 500$ lbf, $L = 1.5$ in)

c , in	T_2 , $^\circ\text{F}$	h_0 , in	f	Q , in ³ /s,	H , Btu/s
0.000 5	226	0.000 38	0.011 3	0.061	0.086
0.001 125	142	0.000 65	0.009 0	0.153	0.068
0.001 55	133	0.000 77	0.008 7	0.218	0.066
0.001 75	128	0.000 76	0.008 4	0.252	0.064
0.002 75	118	0.000 73	0.007 9	0.419	0.060
0.003 95	113	0.000 69	0.007 7	0.617	0.059

(see Table 7-9), p. 385. The results shown in Table 12-3 were obtained by using Eqs. (7-36) and (7-37) of Sec. 7-8. Notice that there is a slight overlap, but the range of clearances for the free-running fit is about twice that of the close-running fit.

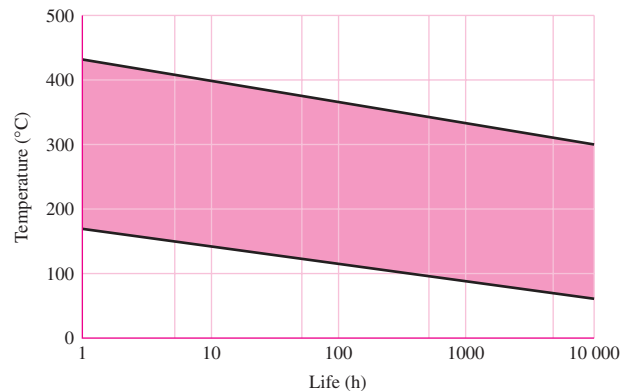
The six clearances of Table 12-3 were used in a computer program to obtain the numerical results shown in Table 12-4. These conform to the results of Fig. 12-25, too. Both the table and the figure show that a tight clearance results in a high temperature. Figure 12-26 can be used to estimate an upper temperature limit when the characteristics of the application are known.

It would seem that a large clearance will permit the dirt particles to pass through and also will permit a large flow of oil, as indicated in Table 12-4. This lowers the temperature and increases the life of the bearing. However, if the clearance becomes too

Figure 12-26

Temperature limits for mineral oils. The lower limit is for oils containing antioxidants and applies when oxygen supply is unlimited. The upper limit applies when insignificant oxygen is present. The life in the shaded zone depends on the amount of oxygen and catalysts present.

(Source: M. J. Neale (ed.), *Tribology Handbook, Section B1*, Newnes-Butterworth, London, 1975.)



large, the bearing becomes noisy and the minimum film thickness begins to decrease again.

In between these two limitations there exists a rather large range of clearances that will result in satisfactory bearing performance.

When both the production tolerance and the future wear on the bearing are considered, it is seen, from Fig. 12-25, that the best compromise is a clearance range slightly to the left of the top of the minimum-film-thickness curve. In this way, future wear will move the operating point to the right and increase the film thickness and decrease the operating temperature.

12-11 Pressure-Fed Bearings

The load-carrying capacity of self-contained natural-circulating journal bearings is quite restricted. The factor limiting better performance is the heat-dissipation capability of the bearing. A first thought of a way to increase heat dissipation is to cool the sump with an external fluid such as water. The high-temperature problem is in the film where the heat is generated but cooling is not possible in the film until later. This does not protect against exceeding the maximum allowable temperature of the lubricant. A second alternative is to reduce the *temperature rise* in the film by dramatically increasing the rate of lubricant flow. The lubricant itself is reducing the temperature rise. A water-cooled sump may still be in the picture. To increase lubricant flow, an external pump must be used with lubricant supplied at pressures of tens of pounds per square inch gage. Because the lubricant is supplied to the bearing under pressure, such bearings are called *pressure-fed bearings*.

To force a greater flow through the bearing and thus obtain an increased cooling effect, a common practice is to use a circumferential groove at the center of the bearing, with an oil-supply hole located opposite the load-bearing zone. Such a bearing is shown in Fig. 12-27. The effect of the groove is to create two half-bearings, each having a smaller l/d ratio than the original. The groove divides the pressure-distribution curve into two lobes and reduces the minimum film thickness, but it has wide acceptance among lubrication engineers because such bearings carry more load without overheating.

To set up a method of solution for oil flow, we shall assume a groove ample enough that the pressure drop in the groove itself is small. Initially we will neglect eccentricity and then apply a correction factor for this condition. The oil flow, then, is the amount that flows out of the two halves of the bearing in the direction of the concentric shaft. If we neglect the rotation of the shaft, the flow of the lubricant is caused by the supply

Figure 12-27

Centrally located full annular groove. (Courtesy of the Cleveland Graphite Bronze Company, Division of Clevite Corporation.)

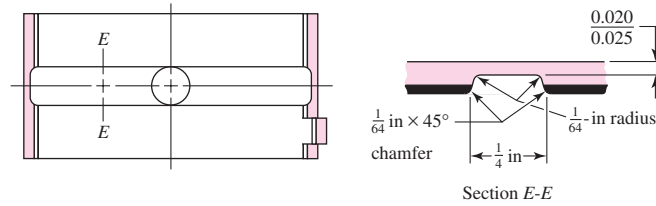
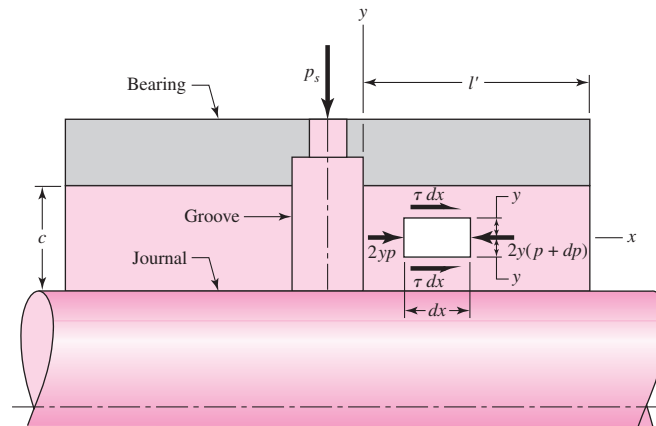


Figure 12-28

Flow of lubricant from a pressure-fed bearing having a central annular groove.



pressure p_s , shown in Fig. 12–28. Laminar flow is assumed, with the pressure varying linearly from $p = p_s$ at $x = 0$, to $p = 0$ at $x = l'$. Consider the static equilibrium of an element of thickness dx , height $2y$, and unit depth. Note particularly that the origin of the reference system has been chosen at the midpoint of the clearance space and symmetry about the x axis is implied with the shear stresses τ being equal on the top and bottom surfaces. The equilibrium equation in the x direction is

$$-2y(p + dp) + 2yp + 2\tau dx = 0 \quad (a)$$

Expanding and canceling terms, we find that

$$\tau = y \frac{dp}{dx} \quad (b)$$

Newton's equation for viscous flow [Eq. (12–1)] is

$$\tau = \mu \frac{du}{dy} \quad (c)$$

Now eliminating τ from Eqs. (b) and (c) gives

$$\frac{du}{dy} = \frac{1}{\mu} \frac{dp}{dx} y \quad (d)$$

Treating dp/dx as a constant and integrating with respect to y gives

$$u = \frac{1}{2\mu} \frac{dp}{dx} y^2 + C_1 \quad (e)$$

At the boundaries, where $y = \pm c/2$, the velocity u is zero. Using one of these conditions in Eq. (e) gives

$$0 = \frac{1}{2\mu} \frac{dp}{dx} \left(\frac{c}{2}\right)^2 + C_1$$

or

$$C_1 = -\frac{c^2}{8\mu} \frac{dp}{dx}$$

Substituting this constant in Eq. (e) yields

$$u = \frac{1}{8\mu} \frac{dp}{dx} (4y^2 - c^2) \quad (f)$$

Assuming the pressure varies linearly from p_s to 0 at $x = 0$ to l' , respectively, the pressure can be written as

$$p = p_s - \frac{p_s}{l'} x \quad (g)$$

and therefore the pressure gradient is given by

$$\frac{dp}{dx} = -\frac{p_s}{l'} \quad (h)$$

We can now substitute Eq. (h) in Eq. (f) to get the relationship between the oil velocity and the coordinate y :

$$u = \frac{p_s}{8\mu l'} (c^2 - 4y^2) \quad (12-21)$$

Figure 12–29 shows a graph of this relation fitted into the clearance space c so that you can see how the velocity of the lubricant varies from the journal surface to the bearing surface. The distribution is parabolic, as shown, with the maximum velocity occurring at the center, where $y = 0$. The magnitude is, from Eq. (12–21),

$$u_{\max} = \frac{p_s c^2}{8\mu l'} \quad (i)$$

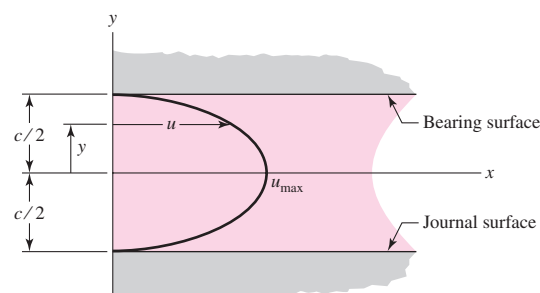
To consider eccentricity, as shown in Fig. 12–30, the film thickness is $h = c - e \cos \theta$. Substituting h for c in Eq. (i), with the average ordinate of a parabola being two-thirds the maximum, the average velocity at any angular position θ is

$$u_{\text{av}} = \frac{2}{3} \frac{p_s h^2}{8\mu l'} = \frac{p_s}{12\mu l'} (c - e \cos \theta)^2 \quad (j)$$

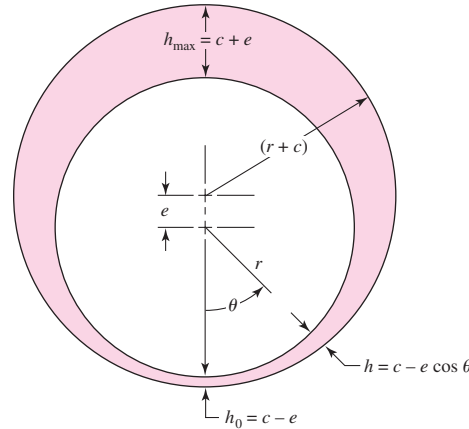
We still have a little further to go in this analysis; so please be patient. Now that we have an expression for the lubricant velocity, we can compute the amount of lubricant

Figure 12-29

Parabolic distribution of the lubricant velocity.



| Figure 12-30



that flows out both ends; the elemental side flow at any position θ (Fig. 12-30) is

$$dQ_s = 2u_{av} dA = 2u_{av}(rh d\theta) \quad (k)$$

where dA is the elemental area. Substituting u_{av} from Eq. (j) and (h) from Fig. 12-30 gives

$$dQ_s = \frac{P_s r}{6\mu l'} (c - e \cos \theta)^3 d\theta \quad (l)$$

Integrating around the bearing gives the total side flow as

$$Q_s = \int dQ_s = \frac{P_s r}{6\mu l'} \int_0^{2\pi} (c - e \cos \theta)^3 d\theta = \frac{P_s r}{6\mu l'} (2\pi c^3 + 3\pi c e^2)$$

Rearranging, with $\epsilon = e/c$, gives

$$Q_s = \frac{\pi P_s r c^3}{3\mu l'} (1 + 1.5\epsilon^2) \quad (12-22)$$

In analyzing the performance of pressure-fed bearings, the bearing length should be taken as l' , as defined in Fig. 12-28. The characteristic pressure in each of the two bearings that constitute the pressure-fed bearing assembly P is given by

$$P = \frac{W/2}{2r l'} = \frac{W}{4r l'} \quad (12-23)$$

The charts for flow variable and flow ratio (Figs. 12-19 and 12-20) do not apply to pressure-fed bearings. Also, the maximum film pressure given by Fig. 12-21 must be increased by the oil supply pressure p_s to obtain the total film pressure.

Since the oil flow has been increased by forced feed, Eq. (12-14) will give a temperature rise that is too high because the side flow carries away all the heat generated. The plumbing in a pressure-fed bearing is depicted schematically in Fig. 12-31. The oil leaves the sump at the externally maintained temperature T_s at the volumetric rate Q_s . The heat gain of the fluid passing through the bearing is

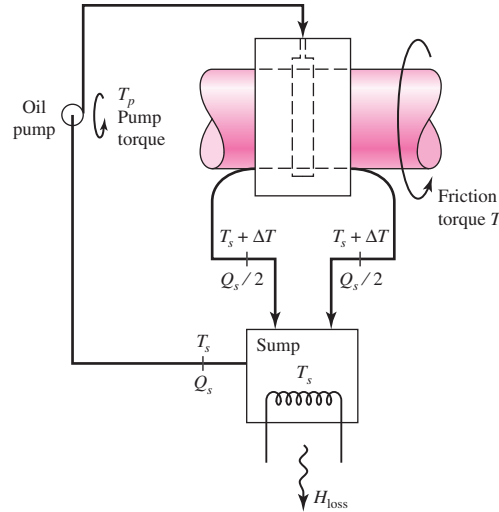
$$H_{\text{gain}} = 2 \rho C_p (Q_s/2) \Delta T = \rho C_p Q_s \Delta T \quad (m)$$

At steady state, the rate at which the journal does frictional work on the fluid film is

$$H_f = \frac{2\pi T N}{J} = \frac{2\pi f W r N}{J} = \frac{2\pi W N c f r}{J c} \quad (n)$$

Figure 12-31

Pressure-fed centrally located full annular-groove journal bearing with external, coiled lubricant sump.



Equating the heat gain to the frictional work and solving for ΔT gives

$$\Delta T = \frac{2\pi W N c}{J \rho C_p Q_s} \frac{f r}{c} \quad (o)$$

Substituting Eq. (12-22) for Q_s in the equation for ΔT gives

$$\Delta T = \frac{2\pi}{J \rho C_p} W N c \frac{f r}{c} \frac{3\mu l'}{(1 + 1.5\epsilon^2)\pi p_s r c^3}$$

The Sommerfeld number may be expressed as

$$S = \left(\frac{r}{c}\right)^2 \frac{\mu N}{P} = \left(\frac{r}{c}\right)^2 \frac{4r l' \mu N}{W}$$

Solving for $\mu N l'$ in the Sommerfeld expression; substituting in the ΔT expression; and using $J = 9336 \text{ lbf} \cdot \text{in}/\text{Btu}$, $\rho = 0.0311 \text{ lbm}/\text{in}^3$, and $C_p = 0.42 \text{ Btu}/(\text{lbm} \cdot ^\circ\text{F})$, we find

$$\Delta T_F = \frac{3(fr/c)SW^2}{2J\rho C_p p_s r^4} \frac{1}{(1 + 1.5\epsilon^2)} = \frac{0.0123(fr/c)SW^2}{(1 + 1.5\epsilon^2)p_s r^4} \quad (12-24)$$

where ΔT_F is ΔT in $^\circ\text{F}$. The corresponding equation in SI units uses the bearing load W in kN, lubricant supply pressure p_s in kPa, and the journal radius r in mm:

$$\Delta T_C = \frac{978(10^6)}{1 + 1.5\epsilon^2} \frac{(fr/c)SW^2}{p_s r^4} \quad (12-25)$$

An analysis example of a pressure-fed bearing will be useful.

EXAMPLE 12-6

A circumferential-groove pressure-fed bearing is lubricated with SAE grade 20 oil supplied at a gauge pressure of 30 psi. The journal diameter d_j is 1.750 in, with a unilateral tolerance of -0.002 in. The central circumferential bushing has a diameter d_b of 1.753 in, with a unilateral tolerance of $+0.004$ in. The l'/d ratio of the two “half-bearings” that constitute the complete pressure-fed bearing is $1/2$. The journal angular speed

is 3000 rev/min, or 50 rev/s, and the radial steady load is 900 lbf. The external sump is maintained at 120°F as long as the necessary heat transfer does not exceed 800 Btu/h.

(a) Find the steady-state average film temperature.

(b) Compare h_0 , T_{\max} , and P_{st} with the Trumpler criteria.

(c) Estimate the volumetric side flow Q_s , the heat loss rate H_{loss} , and the parasitic friction torque.

Solution (a)

$$r = \frac{d_j}{2} = \frac{1.750}{2} = 0.875 \text{ in}$$

$$c_{\min} = \frac{(d_b)_{\min} - (d_j)_{\max}}{2} = \frac{1.753 - 1.750}{2} = 0.0015 \text{ in}$$

Since $l'/d = 1/2$, $l' = d/2 = r = 0.875$ in. Then the pressure due to the load is

$$P = \frac{W}{4rl'} = \frac{900}{4(0.875)(0.875)} = 294 \text{ psi}$$

The Sommerfeld number S can be expressed as

$$S = \left(\frac{r}{c}\right)^2 \frac{\mu N}{P} = \left(\frac{0.875}{0.0015}\right)^2 \frac{\mu'}{(10^6)} \frac{50}{294} = 0.0579\mu' \quad (1)$$

We will use a tabulation method to find the average film temperature. The first trial average film temperature \bar{T}_f will be 170°F. Using the Seireg curve fit of Table 12–1, we obtain

$$\mu' = 0.0136 \exp[1271.6/(170 + 95)] = 1.650 \mu\text{reyn}$$

From Eq. (1)

$$S = 0.0579\mu' = 0.0579(1.650) = 0.0955$$

From Fig. (12–18), $fr/c = 3.3$, and from Fig. (12–16), $\epsilon = 0.80$. From Eq. (12–24),

$$\Delta T_F = \frac{0.0123(3.3)0.0955(900^2)}{[1 + 1.5(0.80)^2]30(0.875^4)} = 91.1^\circ\text{F}$$

$$T_{\text{av}} = T_s + \frac{\Delta T}{2} = 120 + \frac{91.1}{2} = 165.6^\circ\text{F}$$

We form a table, adding a second line with $\bar{T}_f = 168.5^\circ\text{F}$:

Trial \bar{T}_f	μ'	S	fr/c	ϵ	ΔT_F	T_{av}
170	1.65	0.0955	3.3	0.800	91.1	165.6
168.5	1.693	0.0980	3.39	0.792	97.1	168.5

If the iteration had not closed, one could plot trial \bar{T}_f against resulting T_{av} and draw a straight line between them, the intersection with a $\bar{T}_f = T_{\text{av}}$ line defining the new trial \bar{T}_f .

636 Mechanical Engineering Design

Answer The result of this tabulation is $\bar{T}_f = 168.5$, $\Delta T_F = 97.1^\circ\text{F}$, and $T_{\max} = 120 + 97.1 = 217.1^\circ\text{F}$

(b) Since $h_0 = (1 - \epsilon)c$,

$$h_0 = (1 - 0.792)0.0015 = 0.000312 \text{ in}$$

The required four Trumpler criteria, from “Significant Angular Speed” in Sec. 12–7 are

$$h_0 \geq 0.0002 + 0.00004(1.750) = 0.000270 \text{ in} \quad (\text{OK})$$

Answer $T_{\max} = T_s + \Delta T = 120 + 97.1 = 217.1^\circ\text{F} \quad (\text{OK})$

$$P_{st} = \frac{W_{st}}{4rl'} = \frac{900}{4(0.875)0.875} = 294 \text{ psi} \quad (\text{OK})$$

The factor of safety on the load is approximately unity. (Not OK.)

(c) From Eq. (12–22),

Answer $Q_s = \frac{\pi(30)0.875(0.0015)^3}{3(1.693)10^{-6}(0.875)} [1 + 1.5(0.80)^2] = 0.123 \text{ in}^3/\text{s}$

$$H_{\text{loss}} = \rho C_p Q_s \Delta T = 0.0311(0.42)0.123(97.1) = 0.156 \text{ Btu/s}$$

or 562 Btu/h or 0.221 hp. The parasitic friction torque T is

Answer $T = fWr = \frac{fr}{c} Wc = 3.39(900)0.0015 = 4.58 \text{ lbf} \cdot \text{in}$

12-12 Loads and Materials

Some help in choosing unit loads and bearing materials is afforded by Tables 12–5 and 12–6. Since the diameter and length of a bearing depend upon the unit load, these tables will help the designer to establish a starting point in the design.

Table 12-5

Range of Unit Loads in
Current Use for Sleeve
Bearings

Application	Unit Load	
	psi	MPa
Diesel engines:		
Main bearings	900–1700	6–12
Crankpin	1150–2300	8–15
Wristpin	2000–2300	14–15
Electric motors	120–250	0.8–1.5
Steam turbines	120–250	0.8–1.5
Gear reducers	120–250	0.8–1.5
Automotive engines:		
Main bearings	600–750	4–5
Crankpin	1700–2300	10–15
Air compressors:		
Main bearings	140–280	1–2
Crankpin	280–500	2–4
Centrifugal pumps	100–180	0.6–1.2

The length-diameter ratio l/d of a bearing depends upon whether it is expected to run under thin-film-lubrication conditions. A long bearing (large l/d ratio) reduces the coefficient of friction and the side flow of oil and therefore is desirable where thin-film or boundary-value lubrication is present. On the other hand, where forced-feed or positive lubrication is present, the l/d ratio should be relatively small. The short bearing length results in a greater flow of oil out of the ends, thus keeping the bearing cooler. Current practice is to use an l/d ratio of about unity, in general, and then to increase this ratio if thin-film lubrication is likely to occur and to decrease it for thick-film lubrication or high temperatures. If shaft deflection is likely to be severe, a short bearing should be used to prevent metal-to-metal contact at the ends of the bearings.

You should always consider the use of a partial bearing if high temperatures are a problem, because relieving the non-load-bearing area of a bearing can very substantially reduce the heat generated.

The two conflicting requirements of a good bearing material are that it must have a satisfactory compressive and fatigue strength to resist the externally applied loads and that it must be soft and have a low melting point and a low modulus of elasticity. The second set of requirements is necessary to permit the material to wear or break in, since the material can then conform to slight irregularities and absorb and release foreign particles. The resistance to wear and the coefficient of friction are also important because all bearings must operate, at least for part of the time, with thin-film or boundary lubrication.

Additional considerations in the selection of a good bearing material are its ability to resist corrosion and, of course, the cost of producing the bearing. Some of the commonly used materials are listed in Table 12–6, together with their composition and characteristics.

Bearing life can be increased very substantially by depositing a layer of babbitt, or other white metal, in thicknesses from 0.001 to 0.014 in over steel backup material. In fact, a copper-lead layer on steel to provide strength, combined with a babbitt overlay to enhance surface conformability and corrosion resistance, makes an excellent bearing.

Small bushings and thrust collars are often expected to run with thin-film or boundary lubrication. When this is the case, improvements over a solid bearing material can

Table 12–6

Some Characteristics
of Bearing Alloys

Alloy Name	Thickness, in	SAE Number	Clearance Ratio r/c	Load Capacity	Corrosion Resistance
Tin-base babbitt	0.022	12	600–1000	1.0	Excellent
Lead-base babbitt	0.022	15	600–1000	1.2	Very good
Tin-base babbitt	0.004	12	600–1000	1.5	Excellent
Lead-base babbitt	0.004	15	600–1000	1.5	Very good
Leaded bronze	Solid	792	500–1000	3.3	Very good
Copper-lead	0.022	480	500–1000	1.9	Good
Aluminum alloy	Solid		400–500	3.0	Excellent
Silver plus overlay	0.013	17P	600–1000	4.1	Excellent
Cadmium (1.5% Ni)	0.022	18	400–500	1.3	Good
Trimetal 88*				4.1	Excellent
Trimetal 77†				4.1	Very good

*This is a 0.008-in layer of copper-lead on a steel back plus 0.001 in of tin-base babbitt.

†This is a 0.013-in layer of copper-lead on a steel back plus 0.001 in of lead-base babbitt.

be made to add significantly to the life. A powder-metallurgy bushing is porous and permits the oil to penetrate into the bushing material. Sometimes such a bushing may be enclosed by oil-soaked material to provide additional storage space. Bearings are frequently ball-indented to provide small basins for the storage of lubricant while the journal is at rest. This supplies some lubrication during starting. Another method of reducing friction is to indent the bearing wall and to fill the indentations with graphite.

With all these tentative decisions made, a lubricant can be selected and the hydrodynamic analysis made as already presented. The values of the various performance parameters, if plotted as in Fig. 12–25, for example, will then indicate whether a satisfactory design has been achieved or additional iterations are necessary.

12–13 Bearing Types

A bearing may be as simple as a hole machined into a cast-iron machine member. It may still be simple yet require detailed design procedures, as, for example, the two-piece grooved pressure-fed connecting-rod bearing in an automotive engine. Or it may be as elaborate as the large water-cooled, ring-oiled bearings with built-in reservoirs used on heavy machinery.

Figure 12–32 shows two types of bushings. The solid bushing is made by casting, by drawing and machining, or by using a powder-metallurgy process. The lined bushing is usually a split type. In one method of manufacture the molten lining material is cast continuously on thin strip steel. The babbitted strip is then processed through presses, shavers, and broaches, resulting in a lined bushing. Any type of grooving may be cut into the bushings. Bushings are assembled as a press fit and finished by boring, reaming, or burnishing.

Flanged and straight two-piece bearings are shown in Fig. 12–33. These are available in many sizes in both thick- and thin-wall types, with or without lining material. A locking lug positions the bearing and effectively prevents axial or rotational movement of the bearing in the housing.

Some typical groove patterns are shown in Fig. 12–34. In general, the lubricant may be brought in from the end of the bushing, through the shaft, or through the bushing. The flow may be intermittent or continuous. The preferred practice is to bring the

Figure 12–32

Sleeve bushings.

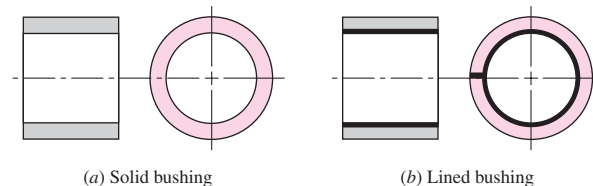


Figure 12–33

Two-piece bushings.

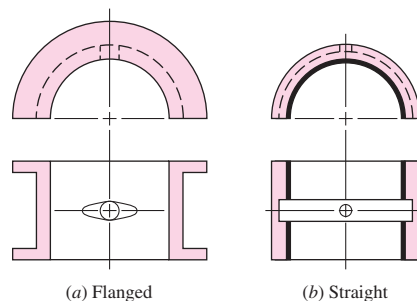
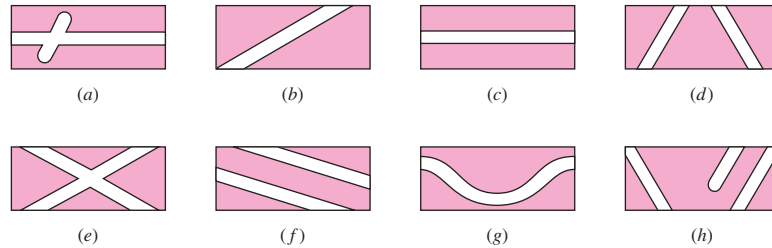


Figure 12-34

Developed views of typical groove patterns. (Courtesy of the Cleveland Graphite Bronze Company, Division of Clevite Corporation.)



oil in at the center of the bushing so that it will flow out both ends, thus increasing the flow and cooling action.

12-14 Thrust Bearings

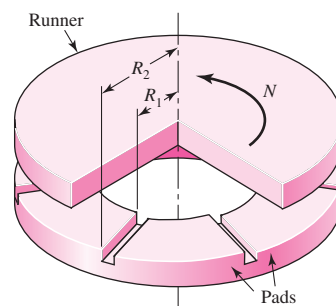
This chapter is devoted to the study of the mechanics of lubrication and its application to the design and analysis of journal bearings. The design and analysis of thrust bearings is an important application of lubrication theory, too. A detailed study of thrust bearings is not included here, because it would not contribute anything significantly different and because of space limitations. Having studied this chapter, you should experience no difficulty in reading the literature on thrust bearings and applying that knowledge to actual design situations.¹¹

Figure 12-35 shows a fixed-pad thrust bearing consisting essentially of a runner sliding over a fixed pad. The lubricant is brought into the radial grooves and pumped into the wedge-shaped space by the motion of the runner. Full-film, or hydrodynamic, lubrication is obtained if the speed of the runner is continuous and sufficiently high, if the lubricant has the correct viscosity, and if it is supplied in sufficient quantity. Figure 12-36 provides a picture of the pressure distribution under conditions of full-film lubrication.

We should note that bearings are frequently made with a flange, as shown in Fig. 12-37. The flange positions the bearing in the housing and also takes a thrust load. Even when it is grooved, however, and has adequate lubrication, such an arrangement is not theoretically a hydrodynamically lubricated thrust bearing. The reason for this is that the clearance space is not wedge-shaped but has a uniform thickness. Similar reasoning would apply to various designs of thrust washers.

Figure 12-35

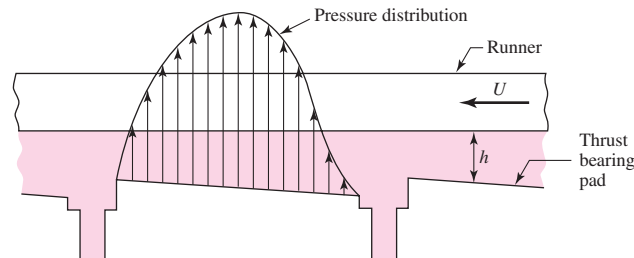
Fixed-pad thrust bearing.
(Courtesy of Westinghouse
Electric Corporation.)



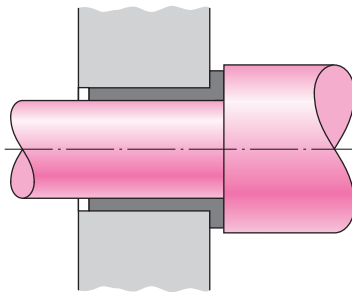
¹¹Harry C. Rippel, *Cast Bronze Thrust Bearing Design Manual*, International Copper Research Association, Inc., 825 Third Ave., New York, NY 10022, 1967. CBBI, 14600 Detroit Ave., Cleveland, OH, 44107, 1967.

Figure 12-36

Pressure distribution of lubricant in a thrust bearing.
(Courtesy of Copper Research Corporation.)

**Figure 12-37**

Flanged sleeve bearing takes both radial and thrust loads.



12-15 Boundary-Lubricated Bearings

When two surfaces slide relative to each other with only a partial lubricant film between them, *boundary lubrication* is said to exist. Boundary- or thin-film lubrication occurs in hydrodynamically lubricated bearings when they are starting or stopping, when the load increases, when the supply of lubricant decreases, or whenever other operating changes happen to occur. There are, of course, a very large number of cases in design in which boundary-lubricated bearings must be used because of the type of application or the competitive situation.

The coefficient of friction for boundary-lubricated surfaces may be greatly decreased by the use of animal or vegetable oils mixed with the mineral oil or grease. Fatty acids, such as stearic acid, palmitic acid, or oleic acid, or several of these, which occur in animal and vegetable fats, are called *oiliness agents*. These acids appear to reduce friction, either because of their strong affinity for certain metallic surfaces or because they form a soap film that binds itself to the metallic surfaces by a chemical reaction. Thus the fatty-acid molecules bind themselves to the journal and bearing surfaces with such great strength that the metallic asperities of the rubbing metals do not weld or shear.

Fatty acids will break down at temperatures of 250°F or more, causing increased friction and wear in thin-film-lubricated bearings. In such cases the *extreme-pressure*, or EP, lubricants may be mixed with the fatty-acid lubricant. These are composed of chemicals such as chlorinated esters or tricresyl phosphate, which form an organic film between the rubbing surfaces. Though the EP lubricants make it possible to operate at higher temperatures, there is the added possibility of excessive chemical corrosion of the sliding surfaces.

When a bearing operates partly under hydrodynamic conditions and partly under dry or thin-film conditions, a *mixed-film lubrication* exists. If the lubricant is supplied by hand oiling, by drop or mechanical feed, or by wick feed, for example, the bearing is

operating under mixed-film conditions. In addition to occurring with a scarcity of lubricant, mixed-film conditions may be present when

- The viscosity is too low.
- The bearing speed is too low.
- The bearing is overloaded.
- The clearance is too tight.
- Journal and bearing are not properly aligned.

Relative motion between surfaces in contact in the presence of a lubricant is called *boundary lubrication*. This condition is present in hydrodynamic film bearings during starting, stopping, overloading, or lubricant deficiency. Some bearings are boundary lubricated (or dry) at all times. To signal this an adjective is placed before the word “bearing.” Commonly applied adjectives (to name a few) are thin-film, boundary friction, Oilite, Oiles, and bushed-pin. The applications include situations in which thick film will not develop and there are low journal speed, oscillating journal, padded slides, light loads, and lifetime lubrication. The characteristics include considerable friction, ability to tolerate expected wear without losing function, and light loading. Such bearings are limited by lubricant temperature, speed, pressure, galling, and cumulative wear. Table 12–7 gives some properties of a range of bushing materials.

Linear Sliding Wear

Consider the sliding block depicted in Fig. 12–38, moving along a plate with contact pressure P' acting over area A , in the presence of a coefficient of sliding friction f_s . The linear measure of wear w is expressed in inches or millimeters. The work done by force $f_s PA$ during displacement S is $f_s PAS$ or $f_s PAVt$, where V is the sliding velocity and t is time. The material volume removed due to wear is wA and is proportional to the work done, that is, $wA \propto f_s PAVt$, or

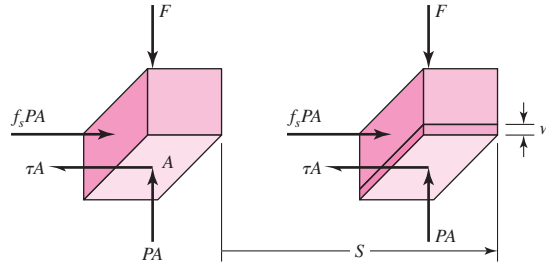
$$wA = KPAVt$$

Table 12-7

Some Materials for
Boundary-Lubricated
Bearings and Their
Operating Limits

Material	Maximum Load, psi	Maximum Temperature, °F	Maximum Speed, fpm	Maximum PV Value*
Cast bronze	4 500	325	1 500	50 000
Porous bronze	4 500	150	1 500	50 000
Porous iron	8 000	150	800	50 000
Phenolics	6 000	200	2 500	15 000
Nylon	1 000	200	1 000	3 000
Teflon	500	500	100	1 000
Reinforced Teflon	2 500	500	1 000	10 000
Teflon fabric	60 000	500	50	25 000
Delrin	1 000	180	1 000	3 000
Carbon-graphite	600	750	2 500	15 000
Rubber	50	150	4 000	
Wood	2 000	150	2 000	15 000

* P = load, psi; V = speed, fpm.

Figure 12-38Sliding block subjected
to wear.**Table 12-8**Wear Factors in U.S.
Customary Units*Source: Oiles America Corp.,
Plymouth, MI 48170.

Bushing Material	Wear Factor K	Limiting PV
Oiles 800	$3(10^{-10})$	18 000
Oiles 500	$0.6(10^{-10})$	46 700
Polyactal copolymer	$50(10^{-10})$	5 000
Polyactal homopolymer	$60(10^{-10})$	3 000
66 nylon	$200(10^{-10})$	2 000
66 nylon + 15% PTFE	$13(10^{-10})$	7 000
+ 15% PTFE + 30% glass	$16(10^{-10})$	10 000
+ 2.5% MoS ₂	$200(10^{-10})$	2 000
6 nylon	$200(10^{-10})$	2 000
Polycarbonate + 15% PTFE	$75(10^{-10})$	7 000
Sintered bronze	$102(10^{-10})$	8 500
Phenol + 25% glass fiber	$8(10^{-10})$	11 500

*dim $[K] = \text{in}^3 \cdot \text{min}/(\text{lbf} \cdot \text{ft} \cdot \text{h})$, dim $[PV] = \text{psi} \cdot \text{ft}/\text{min}$.**Table 12-9**

Coefficients of Friction

Source: Oiles America Corp.,
Plymouth, MI 48170.

Type	Bearing	f_s
Plastic	Oiles 80	0.05
	Composite	0.03
Met	Toughmet	0.05
	Cermet M	0.05
	Oiles 2000	0.03
	Oiles 300	0.03
	Oiles 500SP	0.03

where K is the proportionality factor, which includes f_s , and is determined from laboratory testing. The linear wear is then expressed as

$$w = KPVt \quad (12-26)$$

In US customary units, P is expressed in psi, V in fpm (i.e., ft/min), and t in hours. This makes the units of K $\text{in}^3 \cdot \text{min}/(\text{lbf} \cdot \text{ft} \cdot \text{h})$. SI units commonly used for K are $\text{cm}^3 \cdot \text{min}/(\text{kgf} \cdot \text{m} \cdot \text{h})$, where $1 \text{ kgf} = 9.806 \text{ N}$. Tables 12-8 and 12-9 give some wear factors and coefficients of friction from one manufacturer.

Table 12-10

Motion-Related Factor f_1

Mode of Motion	Characteristic Pressure P , psi		Velocity V , ft/min	f_1^*
Rotary	720 or less		3.3 or less	1.0
			3.3–33	1.0–1.3
			33–100	1.3–1.8
	720–3600		3.3 or less	1.5
			3.3–33	1.5–2.0
			33–100	2.0–2.7
Oscillatory	720 or less	>30°	3.3 or less	1.3
			3.3–100	1.3–2.4
		<30°	3.3 or less	2.0
	720–3600	>30°	3.3 or less	2.0
			3.3–100	2.0–3.2
		<30°	3.3 or less	3.0
Reciprocating	720 or less		33 or less	1.5
			33–100	1.5–3.8
			33 or less	2.0
	720–3600		33–100	2.0–7.5
			33 or less	2.0
			33–100	2.0–7.5

*Values of f_1 based on results over an extended period of time on automotive manufacturing machinery.

Table 12-11

Environmental Factor f_2

Source: Oiles America Corp.,
Plymouth, MI 48170.

Ambient Temperature, °F	Foreign Matter	f_2
140 or lower	No	1.0
140 or lower	Yes	3.0–6.0
140–210	No	3.0–6.0
140–210	Yes	6.0–12.0

It is useful to include a modifying factor f_1 depending on motion type, load, and speed and an environment factor f_2 to account for temperature and cleanliness conditions (see Tables 12–10 and 12–11). These factors account for departures from the laboratory conditions under which K was measured. Equation (12–26) can now be written as

$$w = f_1 f_2 K P V t \quad (12-27)$$

Wear, then, is proportional to PV , material property K , operating conditions f_1 and f_2 , and time t .

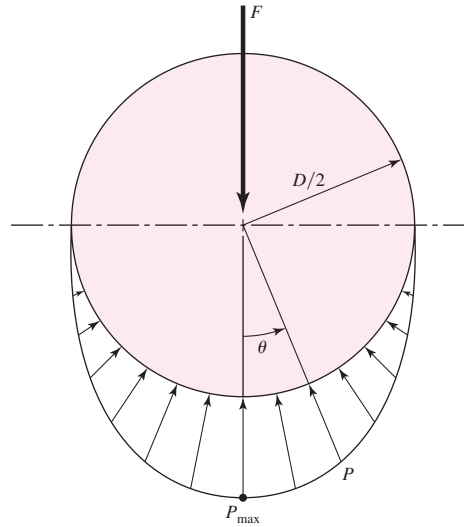
Bushing Wear

Consider a pin of diameter D , rotating at speed N , in a bushing of length L , and supporting a stationary radial load F . The nominal pressure P is given by

$$P = \frac{F}{DL} \quad (12-28)$$

Figure 12-39

Pressure distribution on a
boundary-lubricated bushing.



and if N is in rev/min and D is in inches, velocity in ft/min is given by

$$V = \frac{\pi DN}{12} \quad (12-29)$$

Thus PV , in psi · ft/min, is

$$PV = \frac{F}{DL} \frac{\pi DN}{12} = \frac{\pi FN}{12 L} \quad (12-30)$$

Note the independence of PV from the journal diameter D .

A time-wear equation similar to Eq. (12-27) can be written. However, before doing so, it is important to note that Eq. (12-28) provides the nominal value of P . Figure 12-39 provides a more accurate representation of the pressure distribution, which can be written as

$$p = P_{\max} \cos \theta \quad -\frac{\pi}{2} \leq \theta \leq \frac{\pi}{2}$$

The vertical component of $p dA$ is $p dA \cos \theta = [pL(D/2) d\theta] \cos \theta = P_{\max}(DL/2) \cos^2 \theta d\theta$. Integrating this from $\theta = -\pi/2$ to $\pi/2$ yields F . Thus,

$$\int_{-\pi/2}^{\pi/2} P_{\max} \left(\frac{DL}{2} \right) \cos^2 \theta d\theta = \frac{\pi}{4} P_{\max} DL = F$$

or

$$P_{\max} = \frac{4}{\pi} \frac{F}{DL} \quad (12-31)$$

Substituting V from Eq. (12-29) and P_{\max} for P from Eq. (12-31) into Eq. (12-27) gives

$$w = f_1 f_2 K \frac{4}{\pi} \frac{F}{DL} \frac{\pi DN t}{12} = \frac{f_1 f_2 K FN t}{3L} \quad (12-32)$$

In designing a bushing, because of various trade-offs it is recommended that the length/diameter ratio be in the range

$$0.5 \leq L/D \leq 2 \quad (12-33)$$

EXAMPLE 12-7

An Oiles SP 500 alloy brass bushing is 1 in long with a 1-in bore and operates in a clean environment at 70°F. The allowable wear without loss of function is 0.005 in. The radial load is 700 lbf. The peripheral velocity is 33 ft/min. Estimate the number of revolutions for radial wear to be 0.005 in. See Fig. 12-40 and Table 12-12 from the manufacturer.

Solution

From Table 12-8, $K = 0.6(10^{-10}) \text{ in}^3 \cdot \text{min}/(\text{lbf} \cdot \text{ft} \cdot \text{h})$; Tables 12-10 and 12-11, $f_1 = 1.3$, $f_2 = 1$; and Table 12-12, $PV = 46\,700 \text{ psi} \cdot \text{ft}/\text{min}$, $P_{\max} = 3560 \text{ psi}$, $V_{\max} = 100 \text{ ft}/\text{min}$. From Eqs. (12-31), (12-29), and (12-30),

$$P_{\max} = \frac{4}{\pi} \frac{F}{DL} = \frac{4}{\pi} \frac{700}{(1)(1)} = 891 \text{ psi} < 3560 \text{ psi} \quad (\text{OK})$$

$$P = \frac{F}{DL} = \frac{700}{(1)(1)} = 700 \text{ psi}$$

$$V = 33 \text{ ft}/\text{min} < 100 \text{ ft}/\text{min} \quad (\text{OK})$$

$$PV = 700(33) = 23\,100 \text{ psi} \cdot \text{ft}/\text{min} < 46\,700 \text{ psi} \cdot \text{ft}/\text{min} \quad (\text{OK})$$

Equation (12-32) with Eq. (12-29) is

$$w = f_1 f_2 K \frac{4}{\pi} \frac{F}{DL} \frac{\pi DNt}{12} = f_1 f_2 K \frac{4}{\pi} \frac{F}{DL} Vt$$

Figure 12-40

Journal/bushing for Ex. 12-7.

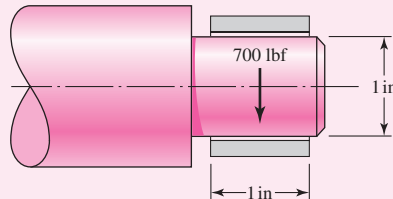


Table 12-12

Oiles 500 SP (SPBN · SPWN) Service Range and Properties

Source: Oiles America Corp., Plymouth, MI 48170.

Service Range	Units	Allowable
Characteristic pressure P_{\max}	psi	<3560
Velocity V_{\max}	ft/min	<100
PV product	(psi)(ft/min)	<46 700
Temperature T	°F	<300
Properties	Test Method, Units	Value
Tensile strength	(ASTM E8) psi	>110 000
Elongation	(ASTM E8) %	>12
Compressive strength	(ASTM E9) psi	49 770
Brinell hardness	(ASTM E10) HB	>210
Coefficient of thermal expansion	(10^{-5}) °C	>1.6
Specific gravity		8.2

Solving for t gives

$$t = \frac{\pi DLw}{4f_1 f_2 K V F} = \frac{\pi(1)(1)0.005}{4(1.3)(1)0.6(10^{-10})33(700)} = 2180 \text{ h} = 130\,770 \text{ min}$$

The rotational speed is

$$N = \frac{12V}{\pi D} = \frac{12(33)}{\pi(1)} = 126 \text{ r/min}$$

Answer

$$\text{Cycles} = Nt = 126(130\,770) = 16.5(10^6) \text{ rev}$$

Temperature Rise

At steady state, the rate at which work is done against bearing friction equals the rate at which heat is transferred from the bearing housing to the surroundings by convection and radiation. The rate of heat generation in Btu/h is given by $f_s FV/J$, or

$$H_{\text{gen}} = \frac{f_s F(\pi D)(60N)}{12J} = \frac{5\pi f_s FDN}{J} \quad (12-34)$$

where N is journal speed in rev/min and $J = 778 \text{ ft} \cdot \text{lbf/Btu}$. The rate at which heat is transferred to the surroundings, in Btu/h, is

$$H_{\text{loss}} = \dot{h}_{\text{CR}} A \Delta T = \dot{h}_{\text{CR}} A (T_b - T_\infty) = \frac{\dot{h}_{\text{CR}} A}{2} (T_f - T_\infty) \quad (12-35)$$

where A = housing surface area, ft^2

\dot{h}_{CR} = overall combined coefficient of heat transfer, $\text{Btu}/(\text{h} \cdot \text{ft}^2 \cdot ^\circ\text{F})$

T_b = housing metal temperature, $^\circ\text{F}$

T_f = lubricant temperature, $^\circ\text{F}$

The empirical observation that T_b is about midway between T_f and T_∞ has been incorporated in Eq. (12–35). Equating Eqs. (12–34) and (12–35) gives

$$T_f = T_\infty + \frac{10\pi f_s FDN}{J\dot{h}_{\text{CR}}A} \quad (12-36)$$

Although this equation seems to indicate the temperature rise $T_f - T_\infty$ is independent of length L , the housing surface area generally is a function of L . The housing surface area can be initially estimated, and as tuning of the design proceeds, improved results will converge. If the bushing is to be housed in a pillow block, the surface area can be roughly estimated from

$$A \doteq \frac{2\pi DL}{144} \quad (12-37)$$

Substituting Eq. (12–37) into Eq. (12–36) gives

$$T_f \doteq T_\infty + \frac{10\pi f_s FDN}{J\dot{h}_{\text{CR}}(2\pi DL/144)} = T_\infty + \frac{720 f_s FN}{J\dot{h}_{\text{CR}}L} \quad (12-38)$$

EXAMPLE 12-8

Choose an Oiles 500 bushing to give a maximum wear of 0.001 in for 800 h of use with a 300 rev/min journal and 50 lbf radial load. Use $\dot{h}_{CR} = 2.7 \text{ Btu}/(\text{h} \cdot \text{ft}^2 \cdot ^\circ\text{F})$, $T_{\max} = 300^\circ\text{F}$, $f_s = 0.03$, and a design factor $n_d = 2$. Table 12–13 lists the available bushing sizes from the manufacturer.

Solution

With a design factor n_d , substitute $n_d F$ for F . First, estimate the bushing length using Eq. (12–32) with $f_1 = f_2 = 1$, and $K = 0.6(10^{-10})$ from Table 12–8:

$$L = \frac{f_1 f_2 K n_d F N t}{3w} = \frac{1(1)0.6(10^{-10})2(50)300(800)}{3(0.001)} = 0.48 \text{ in} \quad (1)$$

From Eq. (12–38) with $f_s = 0.03$ from Table 12–9, $\dot{h}_{CR} = 2.7 \text{ Btu}/(\text{h} \cdot \text{ft}^2 \cdot ^\circ\text{F})$, and $n_d F$ for F ,

$$L \doteq \frac{720 f_s n_d F N}{J \dot{h}_{CR} (T_f - T_\infty)} = \frac{720(0.03)2(50)300}{778(2.7)(300 - 70)} = 1.34 \text{ in}$$

The two results bracket L such that $0.48 \leq L \leq 1.34 \text{ in}$. As a start let $L = 1 \text{ in}$. From Table 12–13, we select $D = 1 \text{ in}$ from the midrange of available bushings.

Table 12-13

Available Bushing Sizes
(in inches) of One
Manufacturer*

ID	OD	L														
		$\frac{1}{2}$	$\frac{5}{8}$	$\frac{3}{4}$	$\frac{7}{8}$	1	$1\frac{1}{4}$	$1\frac{1}{2}$	$1\frac{3}{4}$	2	$2\frac{1}{2}$	3	$3\frac{1}{2}$	4	5	
$\frac{1}{2}$	$\frac{3}{4}$	•	•	•	•	•										
$\frac{5}{8}$	$\frac{7}{8}$		•	•		•		•								
$\frac{3}{4}$	$1\frac{1}{8}$		•	•		•		•								
$\frac{7}{8}$	$1\frac{1}{4}$			•		•	•	•								
1	$1\frac{3}{8}$			•		•	•	•	•							
1	$1\frac{1}{2}$			•		•		•		•						
$1\frac{1}{4}$	$1\frac{5}{8}$					•	•	•	•	•						
$1\frac{1}{2}$	2					•	•	•	•	•						
$1\frac{3}{4}$	$2\frac{1}{4}$						•	•	•	•	•	•	•	•		
2	$2\frac{1}{2}$							•		•	•	•				
$2\frac{1}{4}$	$2\frac{3}{4}$								•		•	•	•			
$2\frac{1}{2}$	3								•		•		•			
$2\frac{3}{4}$	$3\frac{3}{8}$								•		•	•	•			
3	$3\frac{5}{8}$									•	•	•	•	•		
$3\frac{1}{2}$	$4\frac{1}{8}$										•		•		•	
4	$4\frac{3}{4}$										•		•		•	
$4\frac{1}{2}$	$5\frac{3}{8}$											•		•	•	•
5	6												•		•	•

*In a display such as this a manufacturer is likely to show catalog numbers where the • appears.

Trial 1: $D = L = 1$ in.

$$\text{Eq. (12-31): } P_{\max} = \frac{4 n_d F}{\pi DL} = \frac{4 \cdot 2(50)}{\pi \cdot 1(1)} = 127 \text{ psi} < 3560 \text{ psi} \quad (\text{OK})$$

$$P = \frac{n_d F}{DL} = \frac{2(50)}{1(1)} = 100 \text{ psi}$$

$$\text{Eq. (12-29): } V = \frac{\pi DN}{12} = \frac{\pi(1)300}{12} = 78.5 \text{ ft/min} < 100 \text{ ft/min} \quad (\text{OK})$$

$$PV = 100(78.5) = 7850 \text{ psi} \cdot \text{ft/min} < 46\,700 \text{ psi} \cdot \text{ft/min} \quad (\text{OK})$$

From Table 12-9,

V	f_1
33	1.3
78.5	$f_1 \Rightarrow f_1 = 1.64$
100	1.8

Our second estimate is $L \geq 0.48(1.64) = 0.787$ in. From Table 12-13, there is not much available for $L = \frac{7}{8}$ in. So staying with $L = 1$ in, try $D = \frac{1}{2}$ in.

Trial 2: $D = 0.5$ in, $L = 1$ in.

$$P_{\max} = \frac{4 n_d F}{\pi DL} = \frac{4 \cdot 2(50)}{\pi \cdot 0.5(1)} = 255 \text{ psi} < 3560 \text{ psi} \quad (\text{OK})$$

$$P = \frac{n_d F}{DL} = \frac{2(50)}{0.5(1)} = 200 \text{ psi}$$

$$V = \frac{\pi DN}{12} = \frac{\pi(0.5)300}{12} = 39.3 \text{ ft/min} < 100 \text{ ft/min} \quad (\text{OK})$$

Note that PV is not a function of D , and since we did not change L , PV will remain the same:

$$PV = 200(39.3) = 7860 \text{ psi} \cdot \text{ft/min} < 46\,700 \text{ psi} \cdot \text{ft/min} \quad (\text{OK})$$

From Table 12-9, $f_1 = 1.34$, $L \geq 1.34(0.48) = 0.643$ in. There are many $\frac{3}{4}$ -in bushings to select from. The smallest diameter in Table 12-13 is $D = \frac{1}{2}$ in. This gives an L/D ratio of 1.5, which is acceptable according to Eq. (12-33).

Trial 3: $D = 0.5$ in, $L = 0.75$ in. From trial 2, $V = 39.3$ ft/min does not change.

$$P_{\max} = \frac{4 n_d F}{\pi DL} = \frac{4 \cdot 2(50)}{\pi \cdot 0.5(0.75)} = 340 \text{ psi} < 3560 \text{ psi} \quad (\text{OK})$$

$$P = \frac{n_d F}{DL} = \frac{2(50)}{0.5(0.75)} = 267 \text{ psi}$$

$$PV = 267(39.3) = 10\,490 \text{ psi} \cdot \text{ft/min} < 46\,700 \text{ psi} \cdot \text{ft/min} \quad (\text{OK})$$

Answer Select any of the bushings from the trials, where the optimum, from trial 3, is $D = \frac{1}{2}$ in and $L = \frac{3}{4}$ in. Other factors may enter in the overall design that make the other bushings more appropriate.

PROBLEMS

- 12-1** A full journal bearing has a journal diameter of 1.000 in, with a unilateral tolerance of -0.0015 in. The bushing bore has a diameter of 1.0015 in and a unilateral tolerance of 0.003 in. The l/d ratio is unity. The load is 250 lbf and the journal runs at 1100 rev/min. If the average viscosity is $8 \mu\text{reyn}$, find the minimum film thickness, the power loss, and the side flow for the minimum clearance assembly.
- 12-2** A full journal bearing has a journal diameter of 1.250 in, with a unilateral tolerance of -0.001 in. The bushing bore has a diameter of 1.252 in and a unilateral tolerance of 0.003 in. The bearing is 2.5 in long. The journal load is 400 lbf and it runs at a speed of 1150 rev/min. Using an average viscosity of $10 \mu\text{reyn}$ find the minimum film thickness, the maximum film pressure, and the total oil-flow rate for the minimum clearance assembly.
- 12-3** A journal bearing has a journal diameter of 3.000 in, with a unilateral tolerance of -0.001 in. The bushing bore has a diameter of 3.005 in and a unilateral tolerance of 0.004 in. The bushing is 1.5 in long. The journal speed is 600 rev/min and the load is 800 lbf. For both SAE 10 and SAE 40, lubricants, find the minimum film thickness and the maximum film pressure for an operating temperature of 150°F for the minimum clearance assembly.
- 12-4** A journal bearing has a journal diameter of 3.000 in with a unilateral tolerance of -0.003 in. The bushing bore has a diameter of 3.006 in and a unilateral tolerance of 0.004 in. The bushing is 3 in long and supports a 600-lbf load. The journal speed is 750 rev/min. Find the minimum oil film thickness and the maximum film pressure for both SAE 10 and SAE 20W-40 lubricants, for the tightest assembly if the operating film temperature is 140°F .
- 12-5** A full journal bearing has a journal with a diameter of 2.000 in and a unilateral tolerance of -0.0012 in. The bushing has a bore with a diameter of 2.0024 and a unilateral tolerance of 0.002 in. The bushing is 1 in long and supports a load of 600 lbf at a speed of 800 rev/min. Find the minimum film thickness, the power loss, and the total lubricant flow if the average film temperature is 130°F and SAE 20 lubricant is used. The tightest assembly is to be analyzed.
- 12-6** A full journal bearing has a shaft journal diameter of 25 mm with a unilateral tolerance of -0.01 mm. The bushing bore has a diameter of 25.04 mm with a unilateral tolerance of 0.03 mm. The l/d ratio is unity. The bushing load is 1.25 kN, and the journal rotates at 1200 rev/min. Analyze the minimum clearance assembly if the average viscosity is $50 \text{ mPa} \cdot \text{s}$ to find the minimum oil film thickness, the power loss, and the percentage of side flow.
- 12-7** A full journal bearing has a shaft journal with a diameter of 30.00 mm and a unilateral tolerance of -0.015 mm. The bushing bore has a diameter of 30.05 mm with a unilateral tolerance of 0.035 mm. The bushing bore is 50 mm in length. The bearing load is 2.75 kN and the journal rotates at 1120 rev/min. Analyze the minimum clearance assembly and find the minimum film thickness, the coefficient of friction, and the total oil flow if the average viscosity is $60 \text{ mPa} \cdot \text{s}$.
- 12-8** A journal bearing has a shaft diameter of 75.00 mm with a unilateral tolerance of -0.02 mm. The bushing bore has a diameter of 75.10 mm with a unilateral tolerance of 0.06 mm. The bushing is 36 mm long and supports a load of 2 kN. The journal speed is 720 rev/min. For the minimum clearance assembly find the minimum film thickness, the heat loss rate, and the maximum lubricant pressure for SAE 20 and SAE 40 lubricants operating at an average film temperature of 60°C .
- 12-9** A full journal bearing is 25 mm long. The shaft journal has a diameter of 50 mm with a unilateral tolerance of -0.01 mm. The bushing bore has a diameter of 50.05 mm with a unilateral tolerance of 0.01 mm. The load is 2000 N and the journal speed is 840 rev/min. For the minimum clearance assembly find the minimum oil-film thickness, the power loss, and the side flow if the operating temperature is 55°C and SAE 30 lubricating oil is used.

- 12-10** A $1\frac{1}{4} \times 1\frac{1}{4}$ -in sleeve bearing supports a load of 700 lbf and has a journal speed of 3600 rev/min. An SAE 10 oil is used having an average temperature of 160°F. Using Fig. 12-16, estimate the radial clearance for minimum coefficient of friction f and for maximum load-carrying capacity W . The difference between these two clearances is called the clearance range. Is the resulting range attainable in manufacture?
- 12-11** A full journal bearing has a shaft diameter of 80.00 mm with a unilateral tolerance of -0.01 mm. The l/d ratio is unity. The bushing has a bore diameter of 80.08 mm with a unilateral tolerance of 0.03 mm. The SAE 30 oil supply is in an axial-groove sump with a steady-state temperature of 60°C. The radial load is 3000 N. Estimate the average film temperature, the minimum film thickness, the heat loss rate, and the lubricant side-flow rate for the minimum clearance assembly, if the journal speed is 8 rev/s.
- 12-12** A $2\frac{1}{2} \times 2\frac{1}{2}$ -in sleeve bearing uses grade 20 lubricant. The axial-groove sump has a steady-state temperature of 110°F. The shaft journal has a diameter of 2.500 in with a unilateral tolerance of -0.001 in. The bushing bore has a diameter of 2.504 in with a unilateral tolerance of 0.001 in. The journal speed is 1120 rev/min and the radial load is 1200 lbf. Estimate
- The magnitude and location of the minimum oil-film thickness.
 - The eccentricity.
 - The coefficient of friction.
 - The power loss rate.
 - Both the total and side oil-flow rates.
 - The maximum oil-film pressure and its angular location.
 - The terminating position of the oil film.
 - The average temperature of the side flow.
 - The oil temperature at the terminating position of the oil film.
- 12-13** A set of sleeve bearings has a specification of shaft journal diameter of 1.250 in with a unilateral tolerance of -0.001 in. The bushing bore has a diameter of 1.252 in with a unilateral tolerance of 0.003 in. The bushing is $1\frac{1}{4}$ in long. The radial load is 250 lbf and the shaft rotational speed is 1750 rev/min. The lubricant is SAE 10 oil and the axial-groove sump temperature at steady state T_s is 120°F. For the c_{\min} , c_{median} , and c_{\max} assemblies analyze the bearings and observe the changes in S , ϵ , f , Q , Q_s , ΔT , T_{\max} , \bar{T}_f , and hp .
- 12-14** An interpolation equation was given by Raimondi and Boyd, and it is displayed as Eq. (12-16). This equation is a good candidate for a computer program. Write such a program for interactive use. Once ready for service it can save time and reduce errors. Another version of this program can be used with a subprogram that contains curve fits to Raimondi and Boyd charts for computer use.
- 12-15** A natural-circulation pillow-block bearing has a journal diameter D of 2.500 in with a unilateral tolerance of -0.001 in. The bushing bore diameter B is 2.504 in with a unilateral tolerance of 0.004 in. The shaft runs at an angular speed of 1120 rev/min; the bearing uses SAE grade 20 oil and carries a steady load of 300 lbf in shaft-stirred air at 70°F. The lateral area of the pillow-block housing is 60 in². Perform a design assessment using minimum radial clearance for a load of 600 lbf and 300 lbf. Use Trumpler's criteria.
- 12-16** An eight-cylinder diesel engine has a front main bearing with a journal diameter of 3.500 in and a unilateral tolerance of -0.003 in. The bushing bore diameter is 3.505 in with a unilateral tolerance of $+0.005$ in. The bushing length is 2 in. The pressure-fed bearing has a central annular groove 0.250 in wide. The SAE 30 oil comes from a sump at 120°F using a supply pressure of 50 psig. The sump's heat-dissipation capacity is 5000 Btu/h per bearing. For a minimum radial clearance, a speed of 2000 rev/min, and a radial load of 4600 lbf, find the average film temperature and apply Trumpler's criteria in your design assessment.

- 12-17** A pressure-fed bearing has a journal diameter of 50.00 mm with a unilateral tolerance of -0.05 mm. The bushing bore diameter is 50.084 mm with a unilateral tolerance of 0.10 mm. The length of the bushing is 55 mm. Its central annular groove is 5 mm wide and is fed by SAE 30 oil is 55°C at 200 kPa supply gauge pressure. The journal speed is 2880 rev/min carrying a load of 10 kN. The sump can dissipate 300 watts per bearing if necessary. For minimum radial clearances, perform a design assessment using Trumpler's criteria.
- 12-18** Design a central annular-groove pressure-fed bearing with an l'/d ratio of 0.5, using SAE grade 20 oil, the lubricant supplied at 30 psig. The exterior oil cooler can maintain the sump temperature at 120°F for heat dissipation rates up to 1500 Btu/h. The load to be carried is 900 lbf at 3000 rev/min. The groove width is $\frac{1}{4}$ in. Use nominal journal diameter d as one design variable and c as the other. Use Trumpler's criteria for your adequacy assessment.
- 12-19** Repeat design problem Prob. 12-18 using the nominal bushing bore B as one decision variable and the radial clearance c as the other. Again, Trumpler's criteria to be used.
- 12-20** Table 12-1 gives the Seireg and Dandage curve fit for the absolute viscosity in customary U.S. engineering units. Show that in SI units of $\text{mPa} \cdot \text{s}$ and a temperature of C degrees Celsius, the viscosity can be expressed as

$$\mu = 6.89(10^6)\mu_0 \exp[(b/(1.8C + 127))]$$

where μ_0 and b are from Table 12-1. If the viscosity μ'_0 is expressed in μreyn , then

$$\mu = 6.89\mu'_0 \exp[(b/(1.8C + 127))]$$

What is the viscosity of a grade 30 oil at 79°C ?

- 12-21** For Prob. 12-18 a satisfactory design is

$$d = 2.000_{-0.001}^{+0} \text{ in} \quad b = 2.005_{-0}^{+0.003} \text{ in}$$

Double the size of the bearing dimensions and quadruple the load to 3600 lbf.

(a) Analyze the scaled-up bearing for median assembly.

(b) Compare the results of a similar analysis for the 2-in bearing, median assembly.

- 12-22** An Oiles SP 500 alloy brass bushing is 1 in long with a 1-in bore and operates in a clean environment at 70°F . The allowable wear without loss of function is 0.005 in. The radial load is 500 lbf. The shaft speed is 200 rev/min. Estimate the number of revolutions for radial wear to be 0.005 in.
- 12-23** Choose an Oiles SP 500 alloy brass bushing to give a maximum wear of 0.002 in for 1000 h of use with a 400 rev/min journal and 100 lbf radial load. Use $h_{\text{CR}} = 2.7 \text{ Btu}/(\text{h} \cdot \text{ft}^2 \cdot ^{\circ}\text{F})$, $T_{\text{max}} = 300^{\circ}\text{F}$, $f_s = 0.03$, and a design factor $n_d = 2$. Table 12-13 lists the bushing sizes available from the manufacturer.

13

Gears—General

Chapter Outline

13-1	Types of Gears	654
13-2	Nomenclature	655
13-3	Conjugate Action	657
13-4	Involute Properties	658
13-5	Fundamentals	658
13-6	Contact Ratio	664
13-7	Interference	665
13-8	The Forming of Gear Teeth	667
13-9	Straight Bevel Gears	670
13-10	Parallel Helical Gears	671
13-11	Worm Gears	675
13-12	Tooth Systems	676
13-13	Gear Trains	678
13-14	Force Analysis—Spur Gearing	685
13-15	Force Analysis—Bevel Gearing	689
13-16	Force Analysis—Helical Gearing	692
13-17	Force Analysis—Worm Gearing	694

This chapter addresses gear geometry, the kinematic relations, and the forces transmitted by the four principal types of gears: spur, helical, bevel, and worm gears. The forces transmitted between meshing gears supply torsional moments to shafts for motion and power transmission and create forces and moments that affect the shaft and its bearings. The next two chapters will address stress, strength, safety, and reliability of the four types of gears.

13-1 Types of Gears

Spur gears, illustrated in Fig. 13-1, have teeth parallel to the axis of rotation and are used to transmit motion from one shaft to another, parallel, shaft. Of all types, the spur gear is the simplest and, for this reason, will be used to develop the primary kinematic relationships of the tooth form.

Helical gears, shown in Fig. 13-2, have teeth inclined to the axis of rotation. Helical gears can be used for the same applications as spur gears and, when so used, are not as noisy, because of the more gradual engagement of the teeth during meshing. The inclined tooth also develops thrust loads and bending couples, which are not present with spur gearing. Sometimes helical gears are used to transmit motion between nonparallel shafts.

Bevel gears, shown in Fig. 13-3, have teeth formed on conical surfaces and are used mostly for transmitting motion between intersecting shafts. The figure actually illustrates *straight-tooth bevel gears*. *Spiral bevel gears* are cut so the tooth is no longer straight, but forms a circular arc. *Hypoid gears* are quite similar to spiral bevel gears except that the shafts are offset and nonintersecting.

Figure 13-1

Spur gears are used to transmit rotary motion between parallel shafts.

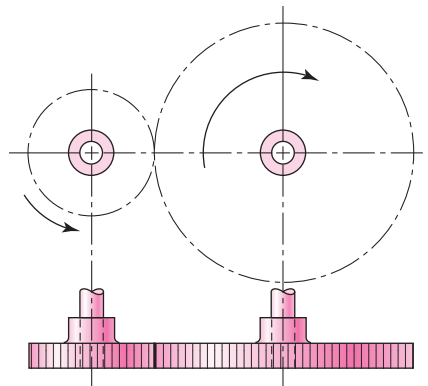


Figure 13-2

Helical gears are used to transmit motion between parallel or nonparallel shafts.

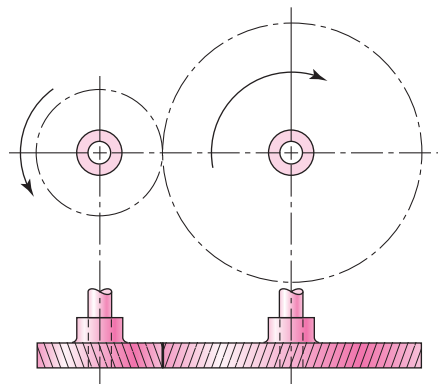
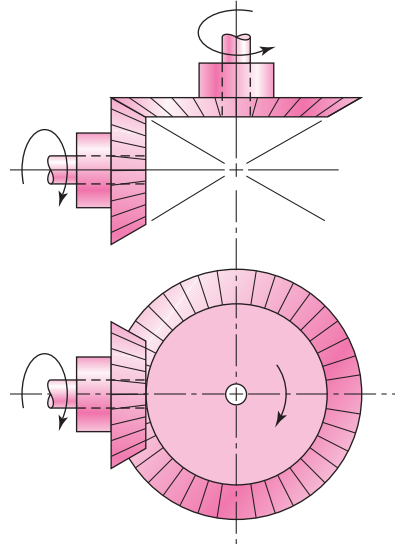
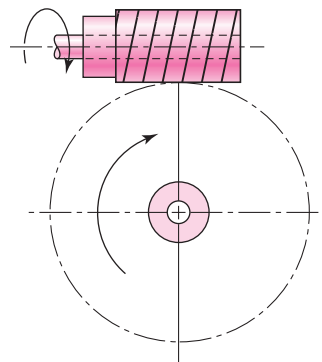


Figure 13-3

Bevel gears are used to transmit rotary motion between intersecting shafts.

**Figure 13-4**

Worm gearsets are used to transmit rotary motion between nonparallel and nonintersecting shafts.



Worms and worm gears, shown in Fig. 13-4, represent the fourth basic gear type. As shown, the worm resembles a screw. The direction of rotation of the worm gear, also called the worm wheel, depends upon the direction of rotation of the worm and upon whether the worm teeth are cut right-hand or left-hand. Worm-gear sets are also made so that the teeth of one or both wrap partly around the other. Such sets are called *single-enveloping* and *double-enveloping* worm-gear sets. Worm-gear sets are mostly used when the speed ratios of the two shafts are quite high, say, 3 or more.

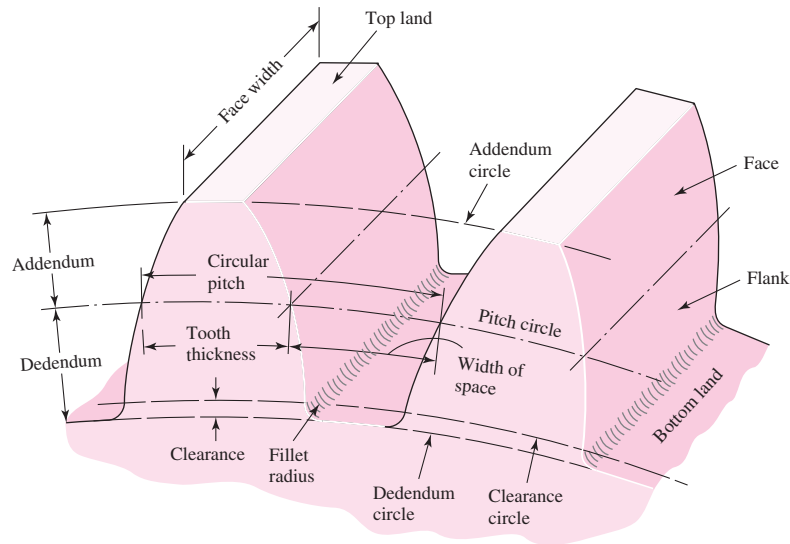
13-2 Nomenclature

The terminology of spur-gear teeth is illustrated in Fig. 13-5. The *pitch circle* is a theoretical circle upon which all calculations are usually based; its diameter is the *pitch diameter*. The pitch circles of a pair of mating gears are tangent to each other. A *pinion* is the smaller of two mating gears. The larger is often called the *gear*.

The *circular pitch* p is the distance, measured on the pitch circle, from a point on one tooth to a corresponding point on an adjacent tooth. Thus the circular pitch is equal to the sum of the *tooth thickness* and the *width of space*.

Figure 13-5

Nomenclature of spur-gear teeth.



The *module* m is the ratio of the pitch diameter to the number of teeth. The customary unit of length used is the millimeter. The module is the index of tooth size in SI.

The *diametral pitch* P is the ratio of the number of teeth on the gear to the pitch diameter. Thus, it is the reciprocal of the module. Since diametral pitch is used only with U.S. units, it is expressed as teeth per inch.

The *addendum* a is the radial distance between the *top land* and the pitch circle. The *dedendum* b is the radial distance from the *bottom land* to the pitch circle. The *whole depth* h_t is the sum of the addendum and the dedendum.

The *clearance circle* is a circle that is tangent to the addendum circle of the mating gear. The *clearance* c is the amount by which the dedendum in a given gear exceeds the addendum of its mating gear. The *backlash* is the amount by which the width of a tooth space exceeds the thickness of the engaging tooth measured on the pitch circle.

You should prove for yourself the validity of the following useful relations:

$$P = \frac{N}{d} \quad (13-1)$$

$$m = \frac{d}{N} \quad (13-2)$$

$$p = \frac{\pi d}{N} = \pi m \quad (13-3)$$

$$pP = \pi \quad (13-4)$$

where P = diametral pitch, teeth per inch

N = number of teeth

d = pitch diameter, in

m = module, mm

d = pitch diameter, mm

p = circular pitch

13–3 Conjugate Action

The following discussion assumes the teeth to be perfectly formed, perfectly smooth, and absolutely rigid. Such an assumption is, of course, unrealistic, because the application of forces will cause deflections.

Mating gear teeth acting against each other to produce rotary motion are similar to cams. When the tooth profiles, or cams, are designed so as to produce a constant angular-velocity ratio during meshing, these are said to have *conjugate action*. In theory, at least, it is possible arbitrarily to select any profile for one tooth and then to find a profile for the meshing tooth that will give conjugate action. One of these solutions is the *involute profile*, which, with few exceptions, is in universal use for gear teeth and is the only one with which we should be concerned.

When one curved surface pushes against another (Fig. 13–6), the point of contact occurs where the two surfaces are tangent to each other (point c), and the forces at any instant are directed along the common normal ab to the two curves. The line ab , representing the direction of action of the forces, is called the *line of action*. The line of action will intersect the line of centers $O-O$ at some point P . The angular-velocity ratio between the two arms is inversely proportional to their radii to the point P . Circles drawn through point P from each center are called *pitch circles*, and the radius of each circle is called the *pitch radius*. Point P is called the *pitch point*.

Figure 13–6 is useful in making another observation. A pair of gears is really pairs of cams that act through a small arc and, before running off the involute contour, are replaced by another identical pair of cams. The cams can run in either direction and are configured to transmit a constant angular-velocity ratio. If involute curves are used, the gears tolerate changes in center-to-center distance with *no* variation in constant angular-velocity ratio. Furthermore, the rack profiles are straight-flanked, making primary tooling simpler.

To transmit motion at a constant angular-velocity ratio, the pitch point must remain fixed; that is, all the lines of action for every instantaneous point of contact must pass through the same point P . In the case of the involute profile, it will be shown that all points of contact occur on the same straight line ab , that all normals to the tooth profiles at the point of contact coincide with the line ab , and, thus, that these profiles transmit uniform rotary motion.

Figure 13–6

Cam A and follower B in contact. When the contacting surfaces are involute profiles, the ensuing conjugate action produces a constant angular-velocity ratio.

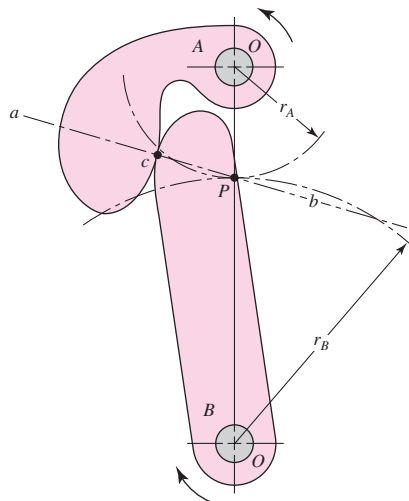
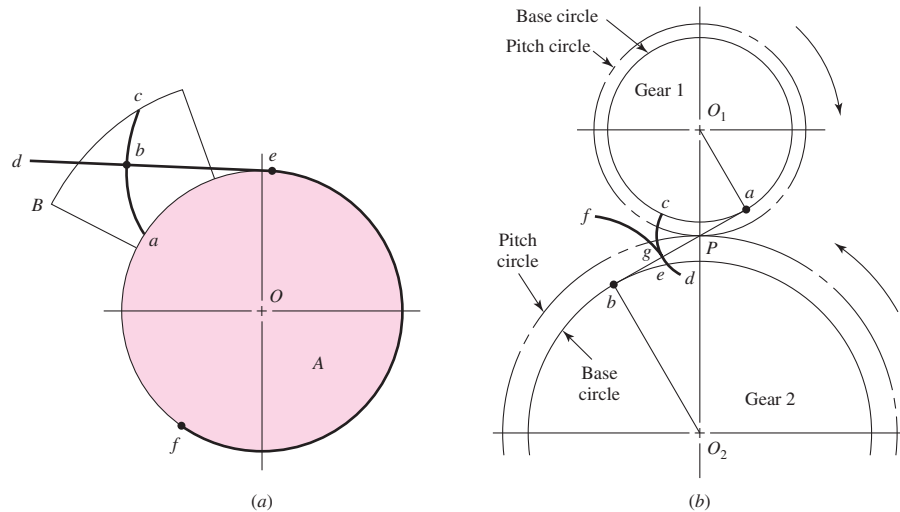


Figure 13-7

- (a) Generation of an involute;
- (b) involute action.



13-4 Involute Properties

An involute curve may be generated as shown in Fig. 13-7a. A partial flange *B* is attached to the cylinder *A*, around which is wrapped a cord *def*, which is held tight. Point *b* on the cord represents the tracing point, and as the cord is wrapped and unwrapped about the cylinder, point *b* will trace out the involute curve *ac*. The radius of the curvature of the involute varies continuously, being zero at point *a* and a maximum at point *c*. At point *b* the radius is equal to the distance *be*, since point *b* is instantaneously rotating about point *e*. Thus the generating line *de* is normal to the involute at all points of intersection and, at the same time, is always tangent to the cylinder *A*. The circle on which the involute is generated is called the *base circle*.

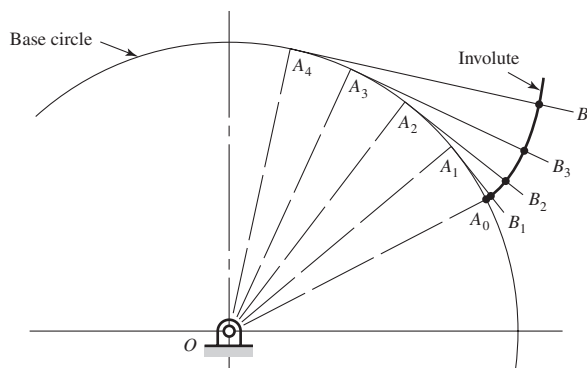
Let us now examine the involute profile to see how it satisfies the requirement for the transmission of uniform motion. In Fig. 13-7b, two gear blanks with fixed centers at O_1 and O_2 are shown having base circles whose respective radii are O_1a and O_2b . We now imagine that a cord is wound clockwise around the base circle of gear 1, pulled tight between points *a* and *b*, and wound counterclockwise around the base circle of gear 2. If, now, the base circles are rotated in different directions so as to keep the cord tight, a point *g* on the cord will trace out the involutes *cd* on gear 1 and *ef* on gear 2. The involutes are thus generated simultaneously by the tracing point. The tracing point, therefore, represents the point of contact, while the portion of the cord *ab* is the generating line. The point of contact moves along the generating line; the generating line does not change position, because it is always tangent to the base circles; and since the generating line is always normal to the involutes at the point of contact, the requirement for uniform motion is satisfied.

13-5 Fundamentals

Among other things, it is necessary that you actually be able to draw the teeth on a pair of meshing gears. You should understand, however, that you are not doing this for manufacturing or shop purposes. Rather, we make drawings of gear teeth to obtain an understanding of the problems involved in the meshing of the mating teeth.

Figure 13–8

Construction of an involute curve.



First, it is necessary to learn how to construct an involute curve. As shown in Fig. 13–8, divide the base circle into a number of equal parts, and construct radial lines OA_0 , OA_1 , OA_2 , etc. Beginning at A_1 , construct perpendiculars A_1B_1 , A_2B_2 , A_3B_3 , etc. Then along A_1B_1 lay off the distance A_1A_0 , along A_2B_2 lay off twice the distance A_1A_0 , etc., producing points through which the involute curve can be constructed.

To investigate the fundamentals of tooth action, let us proceed step by step through the process of constructing the teeth on a pair of gears.

When two gears are in mesh, their pitch circles roll on one another without slipping. Designate the pitch radii as r_1 and r_2 and the angular velocities as ω_1 and ω_2 , respectively. Then the pitch-line velocity is

$$V = |r_1\omega_1| = |r_2\omega_2|$$

Thus the relation between the radii on the angular velocities is

$$\left| \frac{\omega_1}{\omega_2} \right| = \frac{r_2}{r_1} \quad (13-5)$$

Suppose now we wish to design a speed reducer such that the input speed is 1800 rev/min and the output speed is 1200 rev/min. This is a ratio of 3:2; the gear pitch diameters would be in the same ratio, for example, a 4-in pinion driving a 6-in gear. The various dimensions found in gearing are always based on the pitch circles.

Suppose we specify that an 18-tooth pinion is to mesh with a 30-tooth gear and that the diametral pitch of the gearset is to be 2 teeth per inch. Then, from Eq. (13–1), the pitch diameters of the pinion and gear are, respectively,

$$d_1 = \frac{N_1}{P} = \frac{18}{2} = 9 \text{ in} \quad d_2 = \frac{N_2}{P} = \frac{30}{2} = 15 \text{ in}$$

The first step in drawing teeth on a pair of mating gears is shown in Fig. 13–9. The center distance is the sum of the pitch radii, in this case 12 in. So locate the pinion and gear centers O_1 and O_2 , 12 in apart. Then construct the pitch circles of radii r_1 and r_2 . These are tangent at P , the *pitch point*. Next draw line ab , the common tangent, through the pitch point. We now designate gear 1 as the driver, and since it is rotating counter-clockwise, we draw a line cd through point P at an angle ϕ to the common tangent ab . The line cd has three names, all of which are in general use. It is called the *pressure line*, the *generating line*, and the *line of action*. It represents the direction in which the resultant force acts between the gears. The angle ϕ is called the *pressure angle*, and it usually has values of 20 or 25°, though $14\frac{1}{2}^\circ$ was once used.

Figure 13-9

Circles of a gear layout.

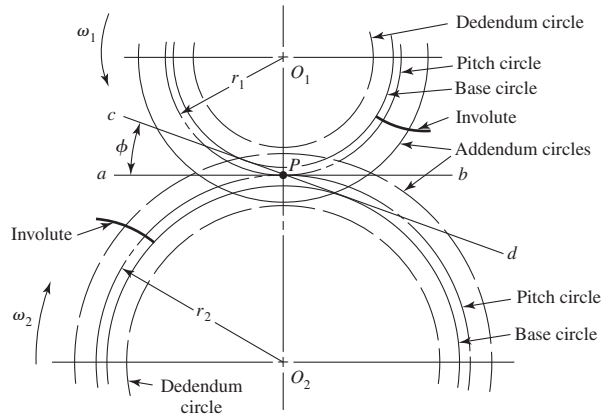
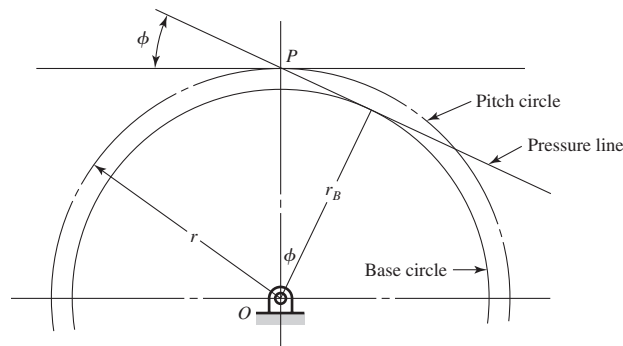


Figure 13-10

Base circle radius can be related to the pressure angle ϕ and the pitch circle radius by $r_b = r \cos \phi$.



Next, on each gear draw a circle tangent to the pressure line. These circles are the *base circles*. Since they are tangent to the pressure line, the pressure angle determines their size. As shown in Fig. 13-10, the radius of the base circle is

$$r_b = r \cos \phi \quad (13-6)$$

where r is the pitch radius.

Now generate an involute on each base circle as previously described and as shown in Fig. 13-9. This involute is to be used for one side of a gear tooth. It is not necessary to draw another curve in the reverse direction for the other side of the tooth, because we are going to use a template which can be turned over to obtain the other side.

The addendum and dedendum distances for standard interchangeable teeth are, as we shall learn later, $1/P$ and $1.25/P$, respectively. Therefore, for the pair of gears we are constructing,

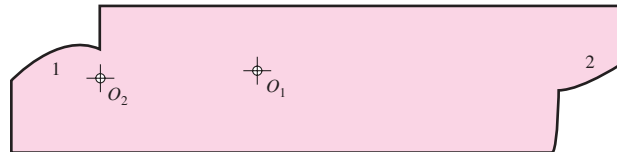
$$a = \frac{1}{P} = \frac{1}{2} = 0.500 \text{ in} \quad b = \frac{1.25}{P} = \frac{1.25}{2} = 0.625 \text{ in}$$

Using these distances, draw the addendum and dedendum circles on the pinion and on the gear as shown in Fig. 13-9.

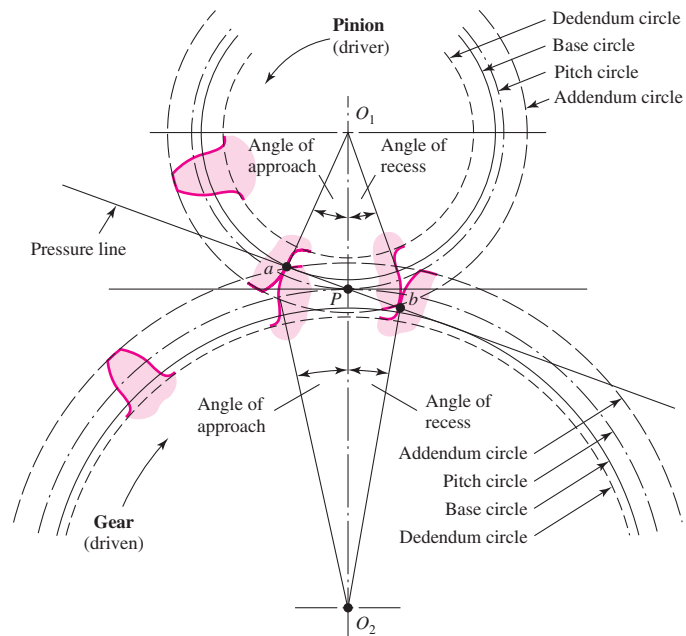
Next, using heavy drawing paper, or preferably, a sheet of 0.015- to 0.020-in clear plastic, cut a template for each involute, being careful to locate the gear centers properly with respect to each involute. Figure 13-11 is a reproduction of the template used to create some of the illustrations for this book. Note that only one side of the tooth profile is formed on the template. To get the other side, turn the template over. For some problems you might wish to construct a template for the entire tooth.

Figure 13-11

A template for drawing gear teeth.

**Figure 13-12**

Tooth action.



To draw a tooth, we must know the tooth thickness. From Eq. (13-4), the circular pitch is

$$p = \frac{\pi}{P} = \frac{\pi}{2} = 1.57 \text{ in}$$

Therefore, the tooth thickness is

$$t = \frac{p}{2} = \frac{1.57}{2} = 0.785 \text{ in}$$

measured on the pitch circle. Using this distance for the tooth thickness as well as the tooth space, draw as many teeth as desired, using the template, after the points have been marked on the pitch circle. In Fig. 13-12 only one tooth has been drawn on each gear. You may run into trouble in drawing these teeth if one of the base circles happens to be larger than the dedendum circle. The reason for this is that the involute begins at the base circle and is undefined below this circle. So, in drawing gear teeth, we usually draw a radial line for the profile below the base circle. The actual shape, however, will depend upon the kind of machine tool used to form the teeth in manufacture, that is, how the profile is generated.

The portion of the tooth between the clearance circle and the dedendum circle includes the fillet. In this instance the clearance is

$$c = b - a = 0.625 - 0.500 = 0.125 \text{ in}$$

The construction is finished when these fillets have been drawn.

Referring again to Fig. 13–12, the pinion with center at O_1 is the driver and turns counterclockwise. The pressure, or generating, line is the same as the cord used in Fig. 13–7a to generate the involute, and contact occurs along this line. The initial contact will take place when the flank of the driver comes into contact with the tip of the driven tooth. This occurs at point a in Fig. 13–12, where the addendum circle of the driven gear crosses the pressure line. If we now construct tooth profiles through point a and draw radial lines from the intersections of these profiles with the pitch circles to the gear centers, we obtain the *angle of approach* for each gear.

As the teeth go into mesh, the point of contact will slide up the side of the driving tooth so that the tip of the driver will be in contact just before contact ends. The final point of contact will therefore be where the addendum circle of the driver crosses the pressure line. This is point b in Fig. 13–12. By drawing another set of tooth profiles through b , we obtain the *angle of recess* for each gear in a manner similar to that of finding the angles of approach. The sum of the angle of approach and the angle of recess for either gear is called the *angle of action*. The line ab is called the *line of action*.

We may imagine a *rack* as a spur gear having an infinitely large pitch diameter. Therefore, the rack has an infinite number of teeth and a base circle which is an infinite distance from the pitch point. The sides of involute teeth on a rack are straight lines making an angle to the line of centers equal to the pressure angle. Figure 13–13 shows an involute rack in mesh with a pinion. Corresponding sides on involute teeth are parallel curves; the *base pitch* is the constant and fundamental distance between them along a common normal as shown in Fig. 13–13. The base pitch is related to the circular pitch by the equation

$$p_b = p_c \cos \phi \quad (13-7)$$

where p_b is the base pitch.

Figure 13–14 shows a pinion in mesh with an *internal*, or *ring*, gear. Note that both of the gears now have their centers of rotation on the same side of the pitch point. Thus the positions of the addendum and dedendum circles with respect to the pitch circle are reversed; the addendum circle of the internal gear lies *inside* the pitch circle. Note, too, from Fig. 13–14, that the base circle of the internal gear lies inside the pitch circle near the addendum circle.

Another interesting observation concerns the fact that the operating diameters of the pitch circles of a pair of meshing gears need not be the same as the respective design pitch diameters of the gears, though this is the way they have been constructed in Fig. 13–12. If we increase the center distance, we create two new operating pitch circles having larger diameters because they must be tangent to each other at the pitch point.

Figure 13-13

Involute-toothed pinion and rack.

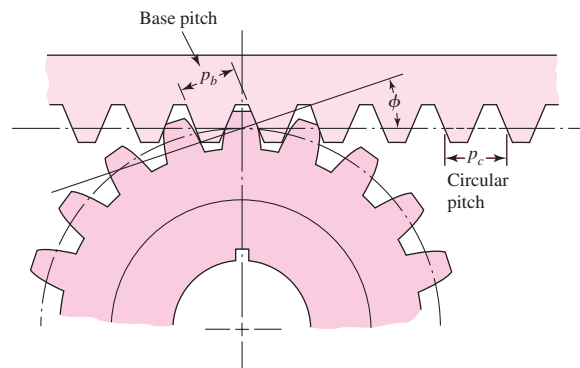
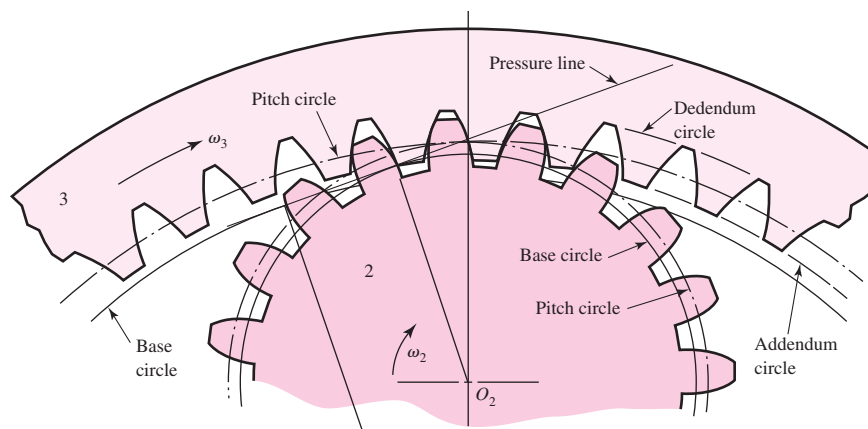


Figure 13-14

Internal gear and pinion.



Thus the pitch circles of gears really do not come into existence until a pair of gears are brought into mesh.

Changing the center distance has no effect on the base circles, because these were used to generate the tooth profiles. Thus the base circle is basic to a gear. Increasing the center distance increases the pressure angle and decreases the length of the line of action, but the teeth are still conjugate, the requirement for uniform motion transmission is still satisfied, and the angular-velocity ratio has not changed.

EXAMPLE 13-1

A gearset consists of a 16-tooth pinion driving a 40-tooth gear. The diametral pitch is 2, and the addendum and dedendum are $1/P$ and $1.25/P$, respectively. The gears are cut using a pressure angle of 20° .

- (a) Compute the circular pitch, the center distance, and the radii of the base circles.
 (b) In mounting these gears, the center distance was incorrectly made $\frac{1}{4}$ in larger. Compute the new values of the pressure angle and the pitch-circle diameters.

Solution**Answer**

$$(a) \quad p = \frac{\pi}{P} = \frac{\pi}{2} = 1.57 \text{ in}$$

The pitch diameters of the pinion and gear are, respectively,

$$d_P = \frac{16}{2} = 8 \text{ in} \quad d_G = \frac{40}{2} = 20 \text{ in}$$

Therefore the center distance is

$$\text{Answer} \quad \frac{d_P + d_G}{2} = \frac{8 + 20}{2} = 14 \text{ in}$$

Since the teeth were cut on the 20° pressure angle, the base-circle radii are found to be, using $r_b = r \cos \phi$,

$$\text{Answer} \quad r_b (\text{pinion}) = \frac{8}{2} \cos 20^\circ = 3.76 \text{ in}$$

$$\text{Answer} \quad r_b (\text{gear}) = \frac{20}{2} \cos 20^\circ = 9.40 \text{ in}$$

(b) Designating d'_P and d'_G as the new pitch-circle diameters, the $\frac{1}{4}$ -in increase in the center distance requires that

$$\frac{d'_P + d'_G}{2} = 14.250 \quad (1)$$

Also, the velocity ratio does not change, and hence

$$\frac{d'_P}{d'_G} = \frac{16}{40} \quad (2)$$

Solving Eqs. (1) and (2) simultaneously yields

Answer $d'_P = 8.143 \text{ in} \quad d'_G = 20.357 \text{ in}$

Since $r_b = r \cos \phi$, the new pressure angle is

Answer $\phi' = \cos^{-1} \frac{r_b \text{ (pinion)}}{d'_P/2} = \cos^{-1} \frac{3.76}{8.143/2} = 22.56^\circ$

13-6 Contact Ratio

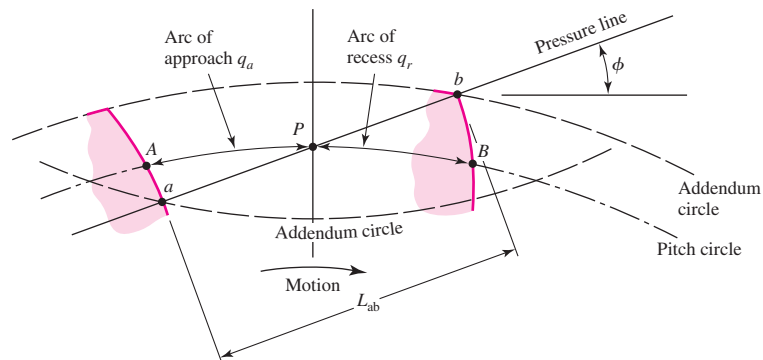
The zone of action of meshing gear teeth is shown in Fig. 13-15. We recall that tooth contact begins and ends at the intersections of the two addendum circles with the pressure line. In Fig. 13-15 initial contact occurs at a and final contact at b . Tooth profiles drawn through these points intersect the pitch circle at A and B , respectively. As shown, the distance AP is called the *arc of approach* q_a , and the distance PB , the *arc of recess* q_r . The sum of these is the *arc of action* q_t .

Now, consider a situation in which the arc of action is exactly equal to the circular pitch, that is, $q_t = p$. This means that one tooth and its space will occupy the entire arc AB . In other words, when a tooth is just beginning contact at a , the previous tooth is simultaneously ending its contact at b . Therefore, during the tooth action from a to b , there will be exactly one pair of teeth in contact.

Next, consider a situation in which the arc of action is greater than the circular pitch, but not very much greater, say, $q_t \doteq 1.2p$. This means that when one pair of teeth is just entering contact at a , another pair, already in contact, will not yet have reached b .

Figure 13-15

Definition of contact ratio.



Thus, for a short period of time, there will be two teeth in contact, one in the vicinity of A and another near B . As the meshing proceeds, the pair near B must cease contact, leaving only a single pair of contacting teeth, until the procedure repeats itself.

Because of the nature of this tooth action, either one or two pairs of teeth in contact, it is convenient to define the term *contact ratio* m_c as

$$m_c = \frac{q_t}{p} \quad (13-8)$$

a number that indicates the average number of pairs of teeth in contact. Note that this ratio is also equal to the length of the path of contact divided by the base pitch. Gears should not generally be designed having contact ratios less than about 1.20, because inaccuracies in mounting might reduce the contact ratio even more, increasing the possibility of impact between the teeth as well as an increase in the noise level.

An easier way to obtain the contact ratio is to measure the line of action ab instead of the arc distance AB . Since ab in Fig. 13–15 is tangent to the base circle when extended, the base pitch p_b must be used to calculate m_c instead of the circular pitch as in Eq. (13–8). If the length of the line of action is L_{ab} , the contact ratio is

$$m_c = \frac{L_{ab}}{p \cos \phi} \quad (13-9)$$

in which Eq. (13–7) was used for the base pitch.

13–7 Interference

The contact of portions of tooth profiles that are not conjugate is called *interference*. Consider Fig. 13–16. Illustrated are two 16-tooth gears that have been cut to the now obsolete $14\frac{1}{2}^\circ$ pressure angle. The driver, gear 2, turns clockwise. The initial and final points of contact are designated A and B , respectively, and are located on the pressure line. Now notice that the points of tangency of the pressure line with the base circles C and D are located *inside* of points A and B . Interference is present.

The interference is explained as follows. Contact begins when the tip of the driven tooth contacts the flank of the driving tooth. In this case the flank of the driving tooth first makes contact with the driven tooth at point A , and this occurs *before* the involute portion of the driving tooth comes within range. In other words, contact is occurring below the base circle of gear 2 on the *noninvolute* portion of the flank. The actual effect is that the involute tip or face of the driven gear tends to dig out the noninvolute flank of the driver.

In this example the same effect occurs again as the teeth leave contact. Contact should end at point D or before. Since it does not end until point B , the effect is for the tip of the driving tooth to dig out, or interfere with, the flank of the driven tooth.

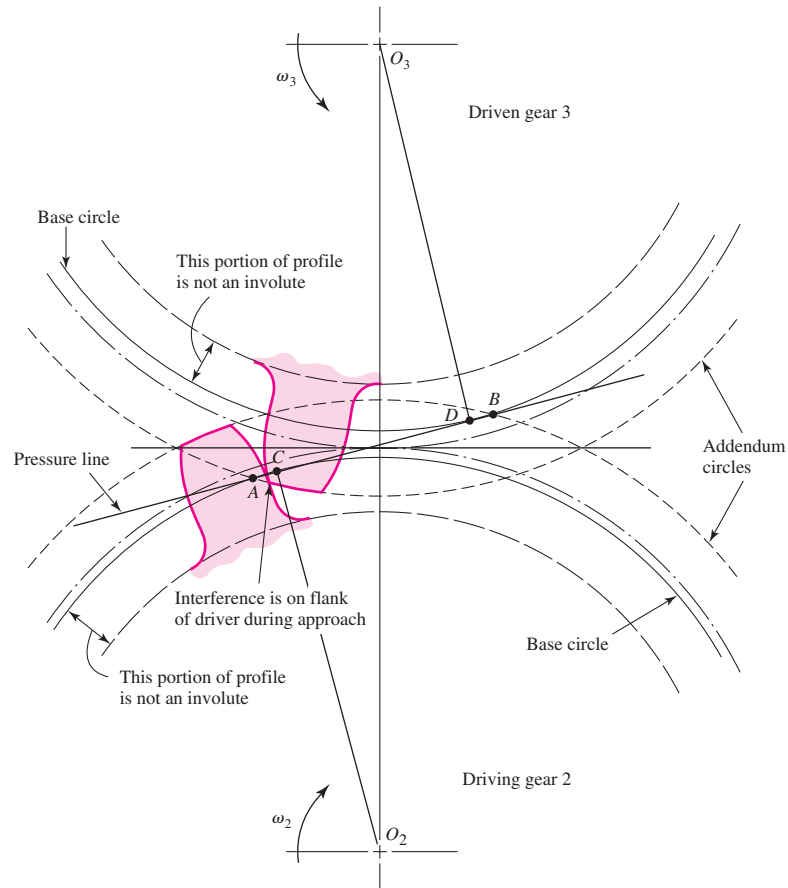
When gear teeth are produced by a generation process, interference is automatically eliminated because the cutting tool removes the interfering portion of the flank. This effect is called *undercutting*; if undercutting is at all pronounced, the undercut tooth is considerably weakened. Thus the effect of eliminating interference by a generation process is merely to substitute another problem for the original one.

The smallest number of teeth on a spur pinion and gear,¹ one-to-one gear ratio, which can exist without interference is N_p . This number of teeth for spur gears is

¹Robert Lipp, "Avoiding Tooth Interference in Gears," *Machine Design*, Vol. 54, No. 1, 1982, pp. 122–124.

Figure 13-16

Interference in the action of gear teeth.



given by

$$N_P = \frac{2k}{3 \sin^2 \phi} \left(1 + \sqrt{1 + 3 \sin^2 \phi} \right) \quad (13-10)$$

where $k = 1$ for full-depth teeth, 0.8 for stub teeth and $\phi =$ pressure angle.

For a 20° pressure angle, with $k = 1$,

$$N_P = \frac{2(1)}{3 \sin^2 20^\circ} \left(1 + \sqrt{1 + 3 \sin^2 20^\circ} \right) = 12.3 = 13 \text{ teeth}$$

Thus 13 teeth on pinion and gear are interference-free. Realize that 12.3 teeth is possible in meshing arcs, but for fully rotating gears, 13 teeth represents the least number. For a $14\frac{1}{2}^\circ$ pressure angle, $N_P = 23$ teeth, so one can appreciate why few $14\frac{1}{2}^\circ$ -tooth systems are used, as the higher pressure angles can produce a smaller pinion with accompanying smaller center-to-center distances.

If the mating gear has more teeth than the pinion, that is, $m_G = N_G/N_P = m$ is more than one, then the smallest number of teeth on the pinion without interference is given by

$$N_P = \frac{2k}{(1 + 2m) \sin^2 \phi} \left(m + \sqrt{m^2 + (1 + 2m) \sin^2 \phi} \right) \quad (13-11)$$

For example, if $m = 4$, $\phi = 20^\circ$,

$$N_P = \frac{2(1)}{[1 + 2(4)] \sin^2 20^\circ} \left[4 + \sqrt{4^2 + [1 + 2(4)] \sin^2 20^\circ} \right] = 15.4 = 16 \text{ teeth}$$

Thus a 16-tooth pinion will mesh with a 64-tooth gear without interference.

The largest gear with a specified pinion that is interference-free is

$$N_G = \frac{N_P^2 \sin^2 \phi - 4k^2}{4k - 2N_P \sin^2 \phi} \quad (13-12)$$

For example, for a 13-tooth pinion with a pressure angle ϕ of 20° ,

$$N_G = \frac{13^2 \sin^2 20^\circ - 4(1)^2}{4(1) - 2(13) \sin^2 20^\circ} = 16.45 = 16 \text{ teeth}$$

For a 13-tooth spur pinion, the maximum number of gear teeth possible without interference is 16.

The smallest spur pinion that will operate with a rack without interference is

$$N_P = \frac{2(k)}{\sin^2 \phi} \quad (13-13)$$

For a 20° pressure angle full-depth tooth the smallest number of pinion teeth to mesh with a rack is

$$N_P = \frac{2(1)}{\sin^2 20^\circ} = 17.1 = 18 \text{ teeth}$$

Since gear-shaping tools amount to contact with a rack, and the gear-hobbing process is similar, the minimum number of teeth to prevent interference to prevent undercutting by the hobbing process is equal to the value of N_P when N_G is infinite.

The importance of the problem of teeth that have been weakened by undercutting cannot be overemphasized. Of course, interference can be eliminated by using more teeth on the pinion. However, if the pinion is to transmit a given amount of power, more teeth can be used only by increasing the pitch diameter.

Interference can also be reduced by using a larger pressure angle. This results in a smaller base circle, so that more of the tooth profile becomes involute. The demand for smaller pinions with fewer teeth thus favors the use of a 25° pressure angle even though the frictional forces and bearing loads are increased and the contact ratio decreased.

13-8 The Forming of Gear Teeth

There are a large number of ways of forming the teeth of gears, such as *sand casting*, *shell molding*, *investment casting*, *permanent-mold casting*, *die casting*, and *centrifugal casting*. Teeth can also be formed by using the *powder-metallurgy process*; or, by using *extrusion*, a single bar of aluminum may be formed and then sliced into gears. Gears that carry large loads in comparison with their size are usually made of steel and are cut with either *form cutters* or *generating cutters*. In form cutting, the tooth space takes the exact form of the cutter. In generating, a tool having a shape different from the tooth profile is moved relative to the gear blank so as to obtain the proper tooth shape. One of the newest and most promising of the methods of forming teeth is called *cold forming*, or *cold rolling*, in which dies are rolled against steel blanks to form the teeth. The mechanical properties of the metal are greatly improved by the rolling process, and a high-quality generated profile is obtained at the same time.

Gear teeth may be machined by milling, shaping, or hobbing. They may be finished by shaving, burnishing, grinding, or lapping.

Gears made of thermoplastics such as nylon, polycarbonate, acetal are quite popular and are easily manufactured by *injection molding*. These gears are of low to moderate precision, low in cost for high production quantities, and capable of light loads, and can run without lubrication.

Milling

Gear teeth may be cut with a form milling cutter shaped to conform to the tooth space. With this method it is theoretically necessary to use a different cutter for each gear, because a gear having 25 teeth, for example, will have a different-shaped tooth space from one having, say, 24 teeth. Actually, the change in space is not too great, and it has been found that eight cutters may be used to cut with reasonable accuracy any gear in the range of 12 teeth to a rack. A separate set of cutters is, of course, required for each pitch.

Shaping

Teeth may be generated with either a pinion cutter or a rack cutter. The pinion cutter (Fig. 13–17) reciprocates along the vertical axis and is slowly fed into the gear blank to the required depth. When the pitch circles are tangent, both the cutter and the blank rotate slightly after each cutting stroke. Since each tooth of the cutter is a cutting tool, the teeth are all cut after the blank has completed one rotation. The sides of an involute rack tooth are straight. For this reason, a rack-generating tool provides an accurate method of cutting gear teeth. This is also a shaping operation and is illustrated by the drawing of Fig. 13–18. In operation, the cutter reciprocates and is first fed into the gear blank until the pitch circles are tangent. Then, after each cutting stroke, the gear blank

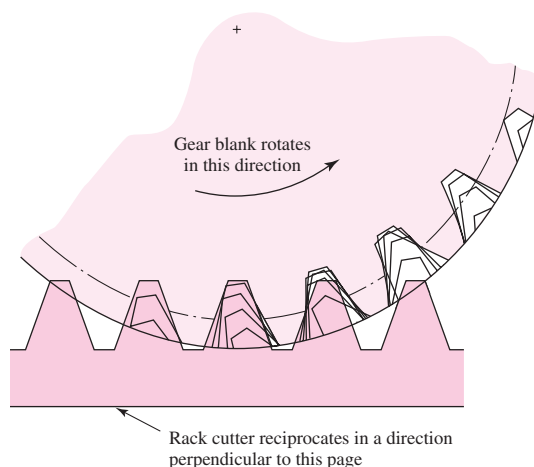
Figure 13-17

Generating a spur gear with a pinion cutter. (Courtesy of Boston Gear Works, Inc.)




Figure 13-18

Shaping teeth with a rack.
(This is a drawing-board figure
that J. E. Shigley executed
over 35 years ago in
response to a question from
a student at the University
of Michigan.)

**Figure 13-19**

Hobbing a worm gear.
(Courtesy of Boston Gear
Works, Inc.)



and cutter roll slightly on their pitch circles. When the blank and cutter have rolled a distance equal to the circular pitch, the cutter is returned to the starting point, and the process is continued until all the teeth have been cut.

Hobbing

The hobbing process is illustrated in Fig. 13-19. The hob is simply a cutting tool that is shaped like a worm. The teeth have straight sides, as in a rack, but the hob axis must be turned through the lead angle in order to cut spur-gear teeth. For this reason, the teeth generated by a hob have a slightly different shape from those generated by a rack cutter. Both the hob and the blank must be rotated at the proper angular-velocity ratio. The hob is then fed slowly across the face of the blank until all the teeth have been cut.

Finishing

Gears that run at high speeds and transmit large forces may be subjected to additional dynamic forces if there are errors in tooth profiles. Errors may be diminished somewhat by finishing the tooth profiles. The teeth may be finished, after cutting, by either shaving or burnishing. Several shaving machines are available that cut off a minute amount of metal, bringing the accuracy of the tooth profile within the limits of $250 \mu\text{in}$.

Burnishing, like shaving, is used with gears that have been cut but not heat-treated. In burnishing, hardened gears with slightly oversize teeth are run in mesh with the gear until the surfaces become smooth.

Grinding and lapping are used for hardened gear teeth after heat treatment. The grinding operation employs the generating principle and produces very accurate teeth. In lapping, the teeth of the gear and lap slide axially so that the whole surface of the teeth is abraded equally.

13–9 Straight Bevel Gears

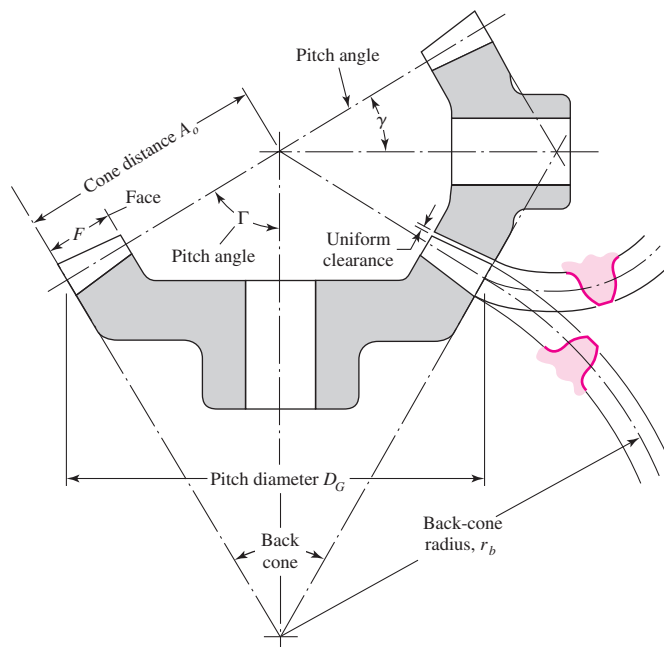
When gears are used to transmit motion between intersecting shafts, some form of bevel gear is required. A bevel gearset is shown in Fig. 13–20. Although bevel gears are usually made for a shaft angle of 90° , they may be produced for almost any angle. The teeth may be cast, milled, or generated. Only the generated teeth may be classed as accurate.

The terminology of bevel gears is illustrated in Fig. 13–20. The pitch of bevel gears is measured at the large end of the tooth, and both the circular pitch and the pitch diameter are calculated in the same manner as for spur gears. It should be noted that the clearance is uniform. The pitch angles are defined by the pitch cones meeting at the apex, as shown in the figure. They are related to the tooth numbers as follows:

$$\tan \gamma = \frac{N_P}{N_G} \quad \tan \Gamma = \frac{N_G}{N_P} \quad (13-14)$$

Figure 13–20

Terminology of bevel gears.



where the subscripts P and G refer to the pinion and gear, respectively, and where γ and Γ are, respectively, the pitch angles of the pinion and gear.

Figure 13–20 shows that the shape of the teeth, when projected on the back cone, is the same as in a spur gear having a radius equal to the back-cone distance r_b . This is called Tredgold's approximation. The number of teeth in this imaginary gear is

$$N' = \frac{2\pi r_b}{p} \quad (13-15)$$

where N' is the *virtual number of teeth* and p is the circular pitch measured at the large end of the teeth. Standard straight-tooth bevel gears are cut by using a 20° pressure angle, unequal addenda and dedenda, and full-depth teeth. This increases the contact ratio, avoids undercut, and increases the strength of the pinion.

13-10 Parallel Helical Gears

Helical gears, used to transmit motion between parallel shafts, are shown in Fig. 13–2. The helix angle is the same on each gear, but one gear must have a right-hand helix and the other a left-hand helix. The shape of the tooth is an involute helicoid and is illustrated in Fig. 13–21. If a piece of paper cut in the shape of a parallelogram is wrapped around a cylinder, the angular edge of the paper becomes a helix. If we unwind this paper, each point on the angular edge generates an involute curve. This surface obtained when every point on the edge generates an involute is called an *involute helicoid*.

The initial contact of spur-gear teeth is a line extending all the way across the face of the tooth. The initial contact of helical-gear teeth is a point that extends into a line as the teeth come into more engagement. In spur gears the line of contact is parallel to the axis of rotation; in helical gears the line is diagonal across the face of the tooth. It is this gradual engagement of the teeth and the smooth transfer of load from one tooth to another that gives helical gears the ability to transmit heavy loads at high speeds. Because of the nature of contact between helical gears, the contact ratio is of only minor importance, and it is the contact area, which is proportional to the face width of the gear, that becomes significant.

Helical gears subject the shaft bearings to both radial and thrust loads. When the thrust loads become high or are objectionable for other reasons, it may be desirable to use double helical gears. A double helical gear (herringbone) is equivalent to two helical gears of opposite hand, mounted side by side on the same shaft. They develop opposite thrust reactions and thus cancel out the thrust load.

When two or more single helical gears are mounted on the same shaft, the hand of the gears should be selected so as to produce the minimum thrust load.

Figure 13-21

An involute helicoid.

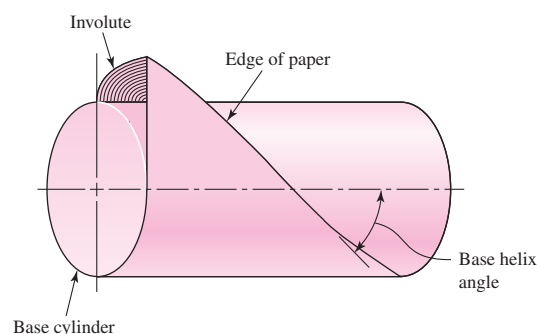


Figure 13–22

Nomenclature of helical gears.

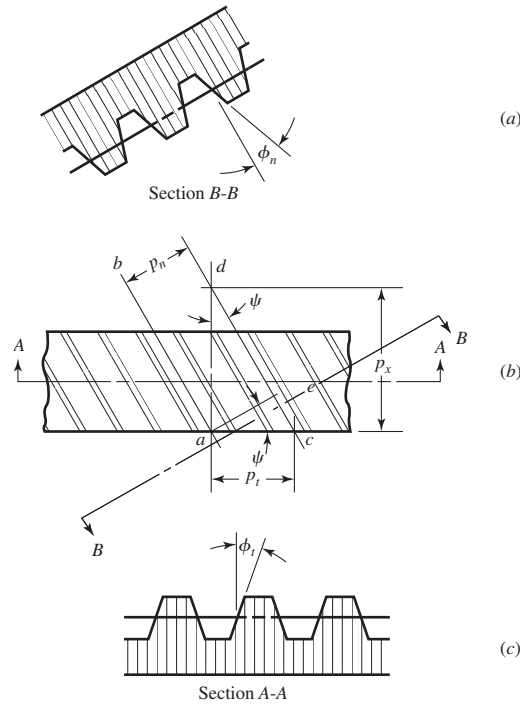


Figure 13–22 represents a portion of the top view of a helical rack. Lines ab and cd are the centerlines of two adjacent helical teeth taken on the same pitch plane. The angle ψ is the *helix angle*. The distance ac is the *transverse circular pitch* p_t in the plane of rotation (usually called the *circular pitch*). The distance ae is the *normal circular pitch* p_n and is related to the transverse circular pitch as follows:

$$p_n = p_t \cos \psi \quad (13-16)$$

The distance ad is called the *axial pitch* p_x and is related by the expression

$$p_x = \frac{p_t}{\tan \psi} \quad (13-17)$$

Since $p_n p_n = \pi$, the *normal diametral pitch* is

$$P_n = \frac{P_t}{\cos \psi} \quad (13-18)$$

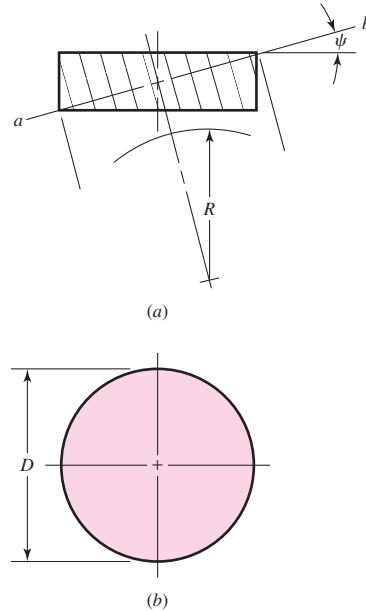
The pressure angle ϕ_n in the normal direction is different from the pressure angle ϕ_t in the direction of rotation, because of the angularity of the teeth. These angles are related by the equation

$$\cos \psi = \frac{\tan \phi_n}{\tan \phi_t} \quad (13-19)$$

Figure 13–23 illustrates a cylinder cut by an oblique plane ab at an angle ψ to a right section. The oblique plane cuts out an arc having a radius of curvature of R . For the condition that $\psi = 0$, the radius of curvature is $R = D/2$. If we imagine the angle ψ to be slowly increased from zero to 90° , we see that R begins at a value of $D/2$ and

Figure 13-23

A cylinder cut by an oblique plane.



increases until, when $\psi = 90^\circ$, $R = \infty$. The radius R is the apparent pitch radius of a helical-gear tooth when viewed in the direction of the tooth elements. A gear of the same pitch and with the radius R will have a greater number of teeth, because of the increased radius. In helical-gear terminology this is called the *virtual number of teeth*. It can be shown by analytical geometry that the virtual number of teeth is related to the actual number by the equation

$$N' = \frac{N}{\cos^3 \psi} \quad (13-20)$$

where N' is the virtual number of teeth and N is the actual number of teeth. It is necessary to know the virtual number of teeth in design for strength and also, sometimes, in cutting helical teeth. This apparently larger radius of curvature means that few teeth may be used on helical gears, because there will be less undercutting.

EXAMPLE 13-2

A stock helical gear has a normal pressure angle of 20° , a helix angle of 25° , and a transverse diametral pitch of 6 teeth/in, and has 18 teeth. Find:

- The pitch diameter
- The transverse, the normal, and the axial pitches
- The normal diametral pitch
- The transverse pressure angle

Solution**Answer (a)**

$$d = \frac{N}{P_t} = \frac{18}{6} = 3 \text{ in}$$

Answer (b)

$$p_t = \frac{\pi}{P_t} = \frac{\pi}{6} = 0.5236 \text{ in}$$

Answer $p_n = p_t \cos \psi = 0.5236 \cos 25^\circ = 0.4745 \text{ in}$

Answer $p_x = \frac{p_t}{\tan \psi} = \frac{0.5236}{\tan 45^\circ} = 1.123 \text{ in}$

Answer (c) $P_n = \frac{P_t}{\cos \psi} = \frac{6}{\cos 25^\circ} = 6.620 \text{ teeth/in}$

Answer (d) $\phi_t = \tan^{-1} \left(\frac{\tan \phi_n}{\cos \psi} \right) = \tan^{-1} \left(\frac{\tan 20^\circ}{\cos 25^\circ} \right) = 21.88^\circ$

Just like teeth on spur gears, helical-gear teeth can interfere. Equation (13–19) can be solved for the pressure angle ϕ_t in the tangential (rotation) direction to give

$$\phi_t = \tan^{-1} \left(\frac{\tan \phi_n}{\cos \psi} \right)$$

The smallest tooth number N_P of a helical-spur pinion that will run without interference² with a gear with the same number of teeth is

$$N_P = \frac{2k \cos \psi}{3 \sin^2 \phi_t} \left(1 + \sqrt{1 + 3 \sin^2 \phi_t} \right) \quad (13-21)$$

For example, if the normal pressure angle ϕ_n is 20° , the helix angle ψ is 30° , then ϕ_t is

$$\phi_t = \tan^{-1} \left(\frac{\tan 20^\circ}{\cos 30^\circ} \right) = 22.80^\circ$$

$$N_P = \frac{2(1) \cos 30^\circ}{3 \sin^2 22.80^\circ} \left(1 + \sqrt{1 + 3 \sin^2 22.80^\circ} \right) = 8.48 = 9 \text{ teeth}$$

For a given gear ratio $m_G = N_G/N_P = m$, the smallest pinion tooth count is

$$N_P = \frac{2k \cos \psi}{(1 + 2m) \sin^2 \phi_t} \left[m + \sqrt{m^2 + (1 + 2m) \sin^2 \phi_t} \right] \quad (13-22)$$

The largest gear with a specified pinion is given by

$$N_G = \frac{N_P^2 \sin^2 \phi_t - 4k^2 \cos^2 \psi}{4k \cos \psi - 2N_P \sin^2 \phi_t} \quad (13-23)$$

For example, for a nine-tooth pinion with a pressure angle ϕ_n of 20° , a helix angle ψ of 30° , and recalling that the tangential pressure angle ϕ_t is 22.80° ,

$$N_G = \frac{9^2 \sin^2 22.80^\circ - 4(1)^2 \cos^2 30^\circ}{4(1) \cos 30^\circ - 2(9) \sin^2 22.80^\circ} = 12.02 = 12$$

The smallest pinion that can be run with a rack is

$$N_P = \frac{2k \cos \psi}{\sin^2 \phi_t} \quad (13-24)$$

²Op. cit., Robert Lipp, *Machine Design*, pp. 122–124.

For a normal pressure angle ϕ_n of 20° and a helix angle ψ of 30° , and $\phi_t = 22.80^\circ$,

$$N_P = \frac{2(1) \cos 30^\circ}{\sin^2 22.80^\circ} = 11.5 = 12 \text{ teeth}$$

For helical-gear teeth the number of teeth in mesh across the width of the gear will be greater than unity and a term called *face-contact ratio* is used to describe it. This increase of contact ratio, and the gradual sliding engagement of each tooth, results in quieter gears.

13-11 Worm Gears

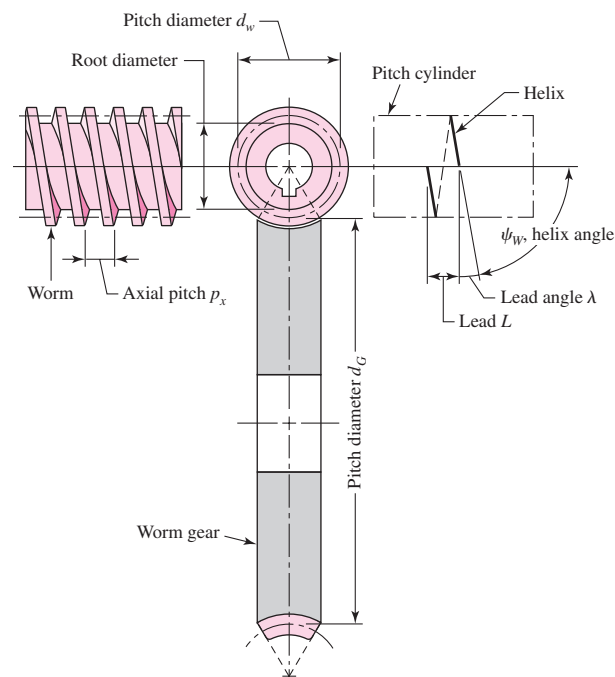
The nomenclature of a worm gear is shown in Fig. 13-24. The worm and worm gear of a set have the same hand of helix as for crossed helical gears, but the helix angles are usually quite different. The helix angle on the worm is generally quite large, and that on the gear very small. Because of this, it is usual to specify the lead angle λ on the worm and helix angle ψ_G on the gear; the two angles are equal for a 90° shaft angle. The worm lead angle is the complement of the worm helix angle, as shown in Fig. 13-24.

In specifying the pitch of worm gearsets, it is customary to state the *axial pitch* p_x of the worm and the *transverse circular pitch* p_t , often simply called the circular pitch, of the mating gear. These are equal if the shaft angle is 90° . The pitch diameter of the gear is the diameter measured on a plane containing the worm axis, as shown in Fig. 13-24; it is the same as for spur gears and is

$$d_G = \frac{N_G p_t}{\pi} \quad (13-25)$$

Figure 13-24

Nomenclature of a single-enveloping worm gearset.



Since it is not related to the number of teeth, the worm may have any pitch diameter; this diameter should, however, be the same as the pitch diameter of the hob used to cut the worm-gear teeth. Generally, the pitch diameter of the worm should be selected so as to fall into the range

$$\frac{C^{0.875}}{3.0} \leq d_w \leq \frac{C^{0.875}}{1.7} \quad (13-26)$$

where C is the center distance. These proportions appear to result in optimum horsepower capacity of the gearset.

The *lead* L and the *lead angle* λ of the worm have the following relations:

$$L = p_x N_w \quad (13-27)$$

$$\tan \lambda = \frac{L}{\pi d_w} \quad (13-28)$$

13-12 Tooth Systems³

A *tooth system* is a standard that specifies the relationships involving addendum, dedendum, working depth, tooth thickness, and pressure angle. The standards were originally planned to attain interchangeability of gears of all tooth numbers, but of the same pressure angle and pitch.

Table 13-1 contains the standards most used for spur gears. A $14\frac{1}{2}^\circ$ pressure angle was once used for these but is now obsolete; the resulting gears had to be comparatively larger to avoid interference problems.

Table 13-2 is particularly useful in selecting the pitch or module of a gear. Cutters are generally available for the sizes shown in this table.

Table 13-3 lists the standard tooth proportions for straight bevel gears. These sizes apply to the large end of the teeth. The nomenclature is defined in Fig. 13-20.

Standard tooth proportions for helical gears are listed in Table 13-4. Tooth proportions are based on the normal pressure angle; these angles are standardized the same

Table 13-1

Standard and
Commonly Used Tooth
Systems for Spur Gears

Tooth System	Pressure Angle ϕ , deg	Addendum a	Dedendum b
Full depth	20	$1/P_d$ or $1m$	$1.25/P_d$ or $1.25m$ $1.35/P_d$ or $1.35m$
	$22\frac{1}{2}$	$1/P_d$ or $1m$	$1.25/P_d$ or $1.25m$ $1.35/P_d$ or $1.35m$
	25	$1/P_d$ or $1m$	$1.25/P_d$ or $1.25m$ $1.35/P_d$ or $1.35m$
			$1/P_d$ or $1m$
Stub	20	$0.8/P_d$ or $0.8m$	$1/P_d$ or $1m$

³Standardized by the American Gear Manufacturers Association (AGMA). Write AGMA for a complete list of standards, because changes are made from time to time. The address is: 1500 King Street, Suite 201, Alexandria, VA 22314; or, www.agma.org.

Table 13-2Tooth Sizes in General
Uses**Diametral Pitch**

Coarse	2, 2 $\frac{1}{4}$, 2 $\frac{1}{2}$, 3, 4, 6, 8, 10, 12, 16
Fine	20, 24, 32, 40, 48, 64, 80, 96, 120, 150, 200

Modules

Preferred	1, 1.25, 1.5, 2, 2.5, 3, 4, 5, 6, 8, 10, 12, 16, 20, 25, 32, 40, 50
Next Choice	1.125, 1.375, 1.75, 2.25, 2.75, 3.5, 4.5, 5.5, 7, 9, 11, 14, 18, 22, 28, 36, 45

Table 13-3Tooth Proportions for
20° Straight Bevel-Gear
Teeth**Item****Formula**

Working depth	$h_k = 2.0/P$										
Clearance	$c = (0.188/P) + 0.002$ in										
Addendum of gear	$a_G = \frac{0.54}{P} + \frac{0.460}{P(m_{90})^2}$										
Gear ratio	$m_G = N_G/N_P$										
Equivalent 90° ratio	$m_{90} = m_G$ when $\Gamma = 90^\circ$ $m_{90} = \sqrt{m_G \frac{\cos \gamma}{\cos \Gamma}}$ when $\Gamma \neq 90^\circ$										
Face width	$F = 0.3A_0$ or $F = \frac{10}{P}$, whichever is smaller										
Minimum number of teeth	<table border="1"> <tr> <td>Pinion</td> <td>16</td> <td>15</td> <td>14</td> <td>13</td> </tr> <tr> <td>Gear</td> <td>16</td> <td>17</td> <td>20</td> <td>30</td> </tr> </table>	Pinion	16	15	14	13	Gear	16	17	20	30
Pinion	16	15	14	13							
Gear	16	17	20	30							

Table 13-4Standard Tooth
Proportions for Helical
Gears**Quantity*****Formula****Quantity*****Formula**

Addendum	$\frac{1.00}{P_n}$	External gears:	
Dedendum	$\frac{1.25}{P_n}$	Standard center distance	$\frac{D+d}{2}$
Pinion pitch diameter	$\frac{N_P}{P_n \cos \psi}$	Gear outside diameter	$D + 2a$
Gear pitch diameter	$\frac{N_G}{P_n \cos \psi}$	Pinion outside diameter	$d + 2a$
Normal arc tooth thickness [†]	$\frac{\pi}{P_n} - \frac{B_n}{2}$	Gear root diameter	$D - 2b$
Pinion base diameter	$d \cos \phi_t$	Pinion root diameter	$d - 2b$
		Internal gears:	
Gear base diameter	$D \cos \phi_t$	Center distance	$\frac{D-d}{2}$
Base helix angle	$\tan^{-1}(\tan \psi \cos \phi_t)$	Inside diameter	$D - 2a$
		Root diameter	$D + 2b$

*All dimensions are in inches, and angles are in degrees.

[†] B_n is the normal backlash.

Table 13-5

Recommended Pressure
Angles and Tooth
Depths for Worm
Gearing

Lead Angle λ_r deg	Pressure Angle ϕ_{nr} deg	Addendum a	Dedendum b_G
0–15	$14\frac{1}{2}$	$0.3683p_x$	$0.3683p_x$
15–30	20	$0.3683p_x$	$0.3683p_x$
30–35	25	$0.2865p_x$	$0.3314p_x$
35–40	25	$0.2546p_x$	$0.2947p_x$
40–45	30	$0.2228p_x$	$0.2578p_x$

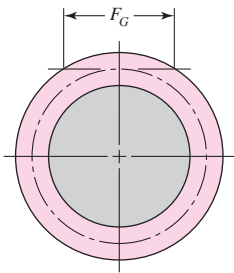


Figure 13-25

A graphical depiction of the
face width of the worm of a
worm gearset.

as for spur gears. Though there will be exceptions, the face width of helical gears should be at least 2 times the axial pitch to obtain good helical-gear action.

Tooth forms for worm gearing have not been highly standardized, perhaps because there has been less need for it. The pressure angles used depend upon the lead angles and must be large enough to avoid undercutting of the worm-gear tooth on the side at which contact ends. A satisfactory tooth depth, which remains in about the right proportion to the lead angle, may be obtained by making the depth a proportion of the axial circular pitch. Table 13-5 summarizes what may be regarded as good practice for pressure angle and tooth depth.

The *face width* F_G of the worm gear should be made equal to the length of a tangent to the worm pitch circle between its points of intersection with the addendum circle, as shown in Fig. 13-25.

13-13 Gear Trains

Consider a pinion 2 driving a gear 3. The speed of the driven gear is

$$n_3 = \left| \frac{N_2}{N_3} n_2 \right| = \left| \frac{d_2}{d_3} n_2 \right| \quad (13-29)$$

where n = revolutions or rev/min

N = number of teeth

d = pitch diameter

Equation (13-29) applies to any gearset no matter whether the gears are spur, helical, bevel, or worm. The absolute-value signs are used to permit complete freedom in choosing positive and negative directions. In the case of spur and parallel helical gears, the directions ordinarily correspond to the right-hand rule and are positive for counter-clockwise rotation.

Rotational directions are somewhat more difficult to deduce for worm and crossed helical gearsets. Figure 13-26 will be of help in these situations.

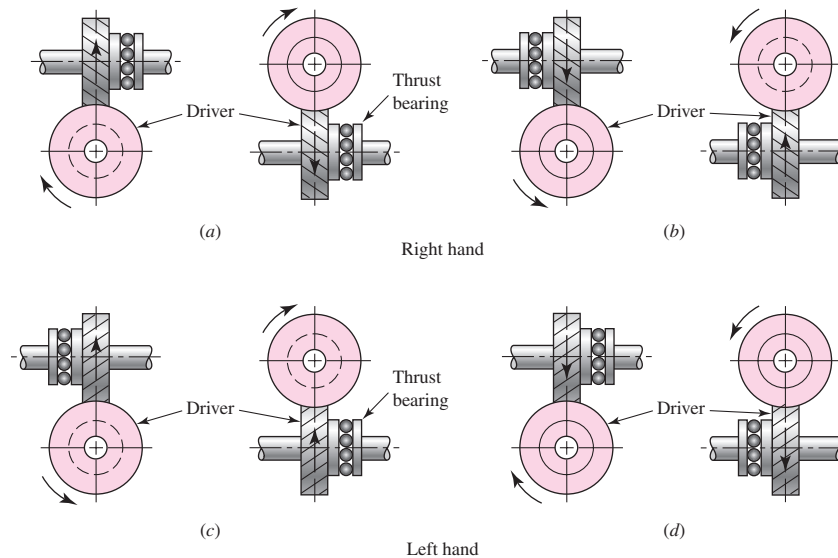
The gear train shown in Fig. 13-27 is made up of five gears. The speed of gear 6 is

$$n_6 = -\frac{N_2}{N_3} \frac{N_3}{N_4} \frac{N_5}{N_6} n_2 \quad (a)$$

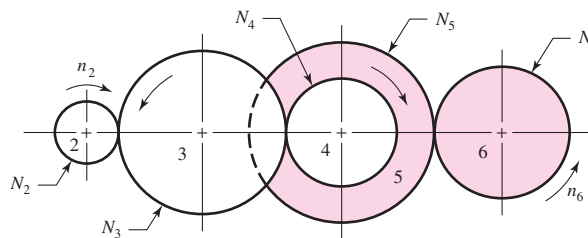
Hence we notice that gear 3 is an idler, that its tooth numbers cancel in Eq. (a), and hence that it affects only the direction of rotation of gear 6. We notice, furthermore, that

Figure 13-26

Thrust, rotation, and hand relations for crossed helical gears. Note that each pair of drawings refers to a single gearset. These relations also apply to worm gearsets. (Reproduced by permission, Boston Gear Division, Colfax Corp.)

**Figure 13-27**

A gear train.



gears 2, 3, and 5 are drivers, while 3, 4, and 6 are driven members. We define the *train value* e as

$$e = \frac{\text{product of driving tooth numbers}}{\text{product of driven tooth numbers}} \quad (13-30)$$

Note that pitch diameters can be used in Eq. (13-30) as well. When Eq. (13-30) is used for spur gears, e is positive if the last gear rotates in the same sense as the first, and negative if the last rotates in the opposite sense.

Now we can write

$$n_L = en_F \quad (13-31)$$

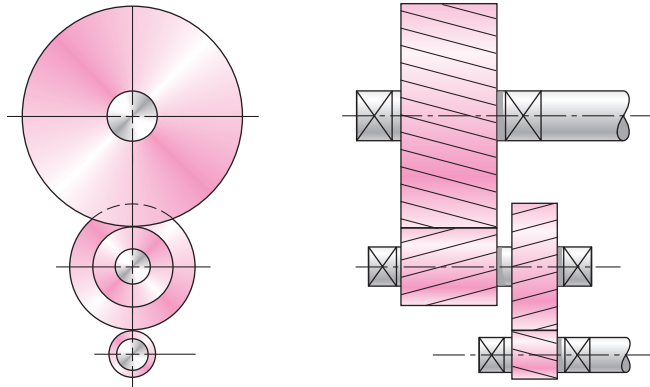
where n_L is the speed of the last gear in the train and n_F is the speed of the first.

As a rough guideline, a train value of up to 10 to 1 can be obtained with one pair of gears. Greater ratios can be obtained in less space and with fewer dynamic problems by compounding additional pairs of gears. A two-stage compound gear train, such as shown in Fig. 13-28, can obtain a train value of up to 100 to 1.

The design of gear trains to accomplish a specific train value is straightforward. Since numbers of teeth on gears must be integers, it is better to determine them first, and then obtain pitch diameters second. Determine the number of stages necessary to obtain the overall ratio, then divide the overall ratio into portions to be accomplished in each

Figure 13-28

A two stage compound gear train.



stage. To minimize package size, keep the portions as evenly divided between the stages as possible. In cases where the overall train value need only be approximated, each stage can be identical. For example, in a two-stage compound gear train, assign the square root of the overall train value to each stage. If an exact train value is needed, attempt to factor the overall train value into integer components for each stage. Then assign the smallest gear(s) to the minimum number of teeth allowed for the specific ratio of each stage, in order to avoid interference (see Sec. 13-7). Finally, applying the ratio for each stage, determine the necessary number of teeth for the mating gears. Round to the nearest integer and check that the resulting overall ratio is within acceptable tolerance.

EXAMPLE 13-3

A gearbox is needed to provide a 30:1 (± 1 percent) increase in speed, while minimizing the overall gearbox size. Specify appropriate teeth numbers.

Solution

Since the ratio is greater than 10:1, but less than 100:1, a two-stage compound gear train, such as in Figure 13-28, is needed. The portion to be accomplished in each stage is $\sqrt{30} = 5.4772$. For this ratio, assuming a typical 20° pressure angle, the minimum number of teeth to avoid interference is 16, according to Eq. (13-11). The number of teeth necessary for the mating gears is

Answer

$$16\sqrt{30} = 87.64 \doteq 88$$

From Eq. (13-30), the overall train value is

$$e = (88/16)(88/16) = 30.25$$

This is within the 1 percent tolerance. If a closer tolerance is desired, then increase the pinion size to the next integer and try again.

EXAMPLE 13-4

A gearbox is needed to provide an *exact* 30:1 increase in speed, while minimizing the overall gearbox size. Specify appropriate teeth numbers.

Solution

The previous example demonstrated the difficulty with finding integer numbers of teeth to provide an exact ratio. In order to obtain integers, factor the overall ratio into two integer stages.

$$e = 30 = (6)(5)$$

$$N_2/N_3 = 6 \quad \text{and} \quad N_4/N_5 = 5$$

With two equations and four unknown numbers of teeth, two free choices are available. Choose N_3 and N_5 to be as small as possible without interference. Assuming a 20° pressure angle, Eq. (13-11) gives the minimum as 16.

Then

$$N_2 = 6 N_3 = 6(16) = 96$$

$$N_4 = 5 N_5 = 5(16) = 80$$

The overall train value is then exact.

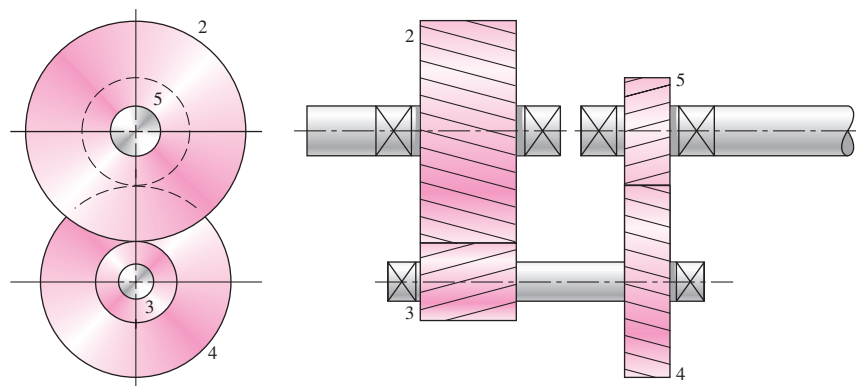
$$e = (96/16)(80/16) = (6)(5) = 30$$

It is sometimes desirable for the input shaft and the output shaft of a two-stage compound geartrain to be in-line, as shown in Fig. 13-29. This configuration is called a *compound reverted geartrain*. This requires the distances between the shafts to be the same for both stages of the train, which adds to the complexity of the design task. The distance constraint is

$$d_2/2 + d_3/2 = d_4/2 + d_5/2$$

Figure 13-29

A compound reverted gear train.



The diametral pitch relates the diameters and the numbers of teeth, $P = N/d$. Replacing all the diameters gives

$$N_2/(2P) + N_3/(2P) = N_4/(2P) + N_5/(2P)$$

Assuming a constant diametral pitch in both stages, we have the geometry condition stated in terms of numbers of teeth:

$$N_2 + N_3 = N_4 + N_5$$

This condition must be exactly satisfied, in addition to the previous ratio equations, to provide for the in-line condition on the input and output shafts.

EXAMPLE 13-5

A gearbox is needed to provide an exact 30:1 increase in speed, while minimizing the overall gearbox size. The input and output shafts should be in-line. Specify appropriate teeth numbers.

Solution The governing equations are

$$N_2/N_3 = 6$$

$$N_4/N_5 = 5$$

$$N_2 + N_3 = N_4 + N_5$$

With three equations and four unknown numbers of teeth, only one free choice is available. Of the two smaller gears, N_3 and N_5 , the free choice should be used to minimize N_3 since a greater gear ratio is to be achieved in this stage. To avoid interference, the minimum for N_3 is 16.

Applying the governing equations yields

$$N_2 = 6N_3 = 6(16) = 96$$

$$N_2 + N_3 = 96 + 16 = 112 = N_4 + N_5$$

Substituting $N_4 = 5N_5$ gives

$$112 = 5N_5 + N_5 = 6N_5$$

$$N_5 = 112/6 = 18.67$$

If the train value need only be approximated, then this can be rounded to the nearest integer. But for an exact solution, it is necessary to choose the initial free choice for N_3 such that solution of the rest of the teeth numbers results exactly in integers. This can be done by trial and error, letting $N_3 = 17$, then 18, etc., until it works. Or, the problem can be normalized to quickly determine the minimum free choice. Beginning again, let the free choice be $N_3 = 1$. Applying the governing equations gives

$$N_2 = 6N_3 = 6(1) = 6$$

$$N_2 + N_3 = 6 + 1 = 7 = N_4 + N_5$$

Substituting $N_4 = 5N_5$, we find

$$7 = 5N_5 + N_5 = 6N_5$$

$$N_5 = 7/6$$

This fraction could be eliminated if it were multiplied by a multiple of 6. The free choice for the smallest gear N_3 should be selected as a multiple of 6 that is greater than the minimum allowed to avoid interference. This would indicate that $N_3 = 18$. Repeating the application of the governing equations for the final time yields

$$N_2 = 6N_3 = 6(18) = 108$$

$$N_2 + N_3 = 108 + 18 = 126 = N_4 + N_5$$

$$126 = 5N_5 + N_5 = 6N_5$$

$$N_5 = 126/6 = 21$$

$$N_4 = 5N_5 = 5(21) = 105$$

Thus,

Answer

$$N_2 = 108$$

$$N_3 = 18$$

$$N_4 = 105$$

$$N_5 = 21$$

Checking, we calculate $e = (108/18)(105/21) = (6)(5) = 30$.

And checking the geometry constraint for the in-line requirement, we calculate

$$N_2 + N_3 = N_4 + N_5$$

$$108 + 18 = 105 + 21$$

$$126 = 126$$

Unusual effects can be obtained in a gear train by permitting some of the gear axes to rotate about others. Such trains are called *planetary*, or *epicyclic*, gear trains. Planetary trains always include a *sun gear*, a *planet carrier* or *arm*, and one or more *planet gears*, as shown in Fig. 13–30. Planetary gear trains are unusual mechanisms because they have two degrees of freedom; that is, for constrained motion, a planetary train must have two inputs. For example, in Fig. 13–30 these two inputs could be the motion of any two of the elements of the train. We might, say, specify that the sun gear rotates at 100 rev/min clockwise and that the ring gear rotates at 50 rev/min counter-clockwise; these are the inputs. The output would be the motion of the arm. In most planetary trains one of the elements is attached to the frame and has no motion.

Figure 13-30

A planetary gear train.

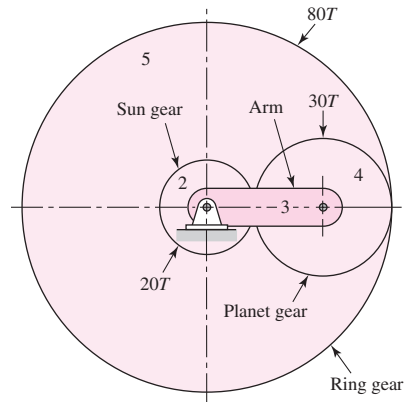


Figure 13-31

A gear train on the arm of a planetary gear train.

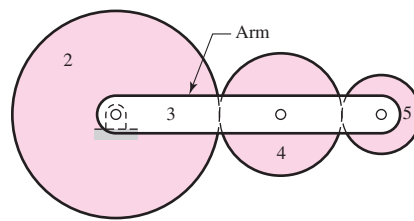


Figure 13–31 shows a planetary train composed of a sun gear 2, an arm or carrier 3, and planet gears 4 and 5. The angular velocity of gear 2 relative to the arm in rev/min is

$$n_{23} = n_2 - n_3 \quad (b)$$

Also, the velocity of gear 5 relative to the arm is

$$n_{53} = n_5 - n_3 \quad (c)$$

Dividing Eq. (c) by Eq. (b) gives

$$\frac{n_{53}}{n_{23}} = \frac{n_5 - n_3}{n_2 - n_3} \quad (d)$$

Equation (d) expresses the ratio of gear 5 to that of gear 2, and both velocities are taken relative to the arm. Now this ratio is the same and is proportional to the tooth numbers, whether the arm is rotating or not. It is the train value. Therefore, we may write

$$e = \frac{n_5 - n_3}{n_2 - n_3} \quad (e)$$

This equation can be used to solve for the output motion of any planetary train. It is more conveniently written in the form

$$e = \frac{n_L - n_A}{n_F - n_A} \quad (13-32)$$

where n_F = rev/min of first gear in planetary train
 n_L = rev/min of last gear in planetary train
 n_A = rev/min of arm

EXAMPLE 13-6

In Fig. 13-30 the sun gear is the input, and it is driven clockwise at 100 rev/min. The ring gear is held stationary by being fastened to the frame. Find the rev/min and direction of rotation of the arm and gear 4.

Solution

Designate $n_F = n_2 = -100$ rev/min, and $n_L = n_5 = 0$. Unlocking gear 5 and holding the arm stationary, in our imagination, we find

$$e = -\left(\frac{20}{30}\right)\left(\frac{30}{80}\right) = -0.25$$

Substituting this value in Eq. (13-32) gives

$$-0.25 = \frac{0 - n_A}{(-100) - n_A}$$

or

Answer

$$n_A = -20 \text{ rev/min}$$

To obtain the speed of gear 4, we follow the procedure outlined by Eqs. (b), (c), and (d). Thus

$$n_{43} = n_4 - n_3 \quad n_{23} = n_2 - n_3$$

and so

$$\frac{n_{43}}{n_{23}} = \frac{n_4 - n_3}{n_2 - n_3} \quad (1)$$

But

$$\frac{n_{43}}{n_{23}} = -\frac{20}{30} = -\frac{2}{3} \quad (2)$$

Substituting the known values in Eq. (1) gives

$$-\frac{2}{3} = \frac{n_4 - (-20)}{(-100) - (-20)}$$

Solving gives

Answer

$$n_4 = 33\frac{1}{3} \text{ rev/min}$$

13-14 Force Analysis—Spur Gearing

Before beginning the force analysis of gear trains, let us agree on the notation to be used. Beginning with the numeral 1 for the frame of the machine, we shall designate the input gear as gear 2, and then number the gears successively 3, 4, etc., until we

arrive at the last gear in the train. Next, there may be several shafts involved, and usually one or two gears are mounted on each shaft as well as other elements. We shall designate the shafts, using lowercase letters of the alphabet, a , b , c , etc.

With this notation we can now speak of the force exerted by gear 2 against gear 3 as F_{23} . The force of gear 2 against a shaft a is F_{2a} . We can also write F_{a2} to mean the force of a shaft a against gear 2. Unfortunately, it is also necessary to use superscripts to indicate directions. The coordinate directions will usually be indicated by the x , y , and z coordinates, and the radial and tangential directions by superscripts r and t . With this notation, F_{43}^t is the tangential component of the force of gear 4 acting against gear 3.

Figure 13–32a shows a pinion mounted on shaft a rotating clockwise at n_2 rev/min and driving a gear on shaft b at n_3 rev/min. The reactions between the mating teeth occur along the pressure line. In Fig. 13–32b the pinion has been separated from the gear and the shaft, and their effects have been replaced by forces. F_{a2} and T_{a2} are the force and torque, respectively, exerted by shaft a against pinion 2. F_{32} is the force exerted by gear 3 against the pinion. Using a similar approach, we obtain the free-body diagram of the gear shown in Fig. 13–32c.

In Fig. 13–33, the free-body diagram of the pinion has been redrawn and the forces have been resolved into tangential and radial components. We now define

$$W_t = F_{32}^t \tag{a}$$

as the *transmitted load*. This tangential load is really the useful component, because the radial component F_{32}^r serves no useful purpose. It does not transmit power. The applied torque and the transmitted load are seen to be related by the equation

$$T = \frac{d}{2} W_t \tag{b}$$

where we have used $T = T_{a2}$ and $d = d_2$ to obtain a general relation.

The power H transmitted through a rotating gear can be obtained from the standard relationship of the product of torque T and angular velocity ω .

$$H = T\omega = (W_t d/2)\omega \tag{13-33}$$

Figure 13-32

Free-body diagrams of the forces and moments acting upon two gears of a simple gear train.

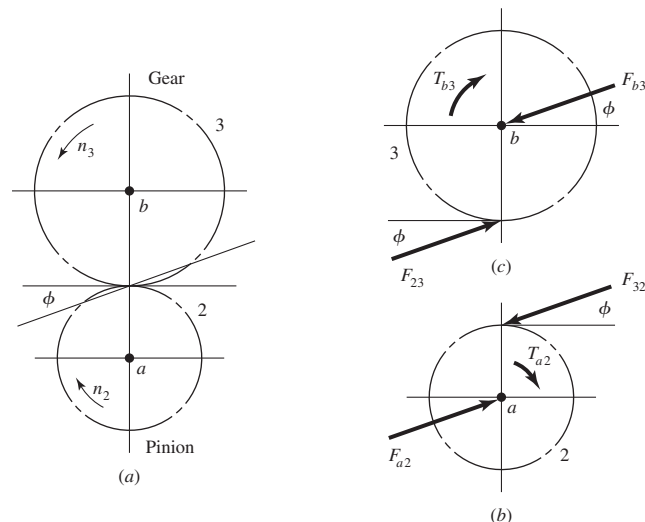
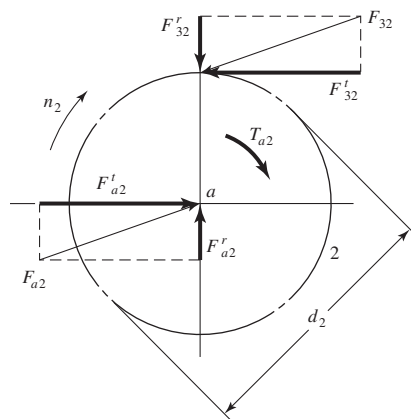


Figure 13-33

Resolution of gear forces.



While any units can be used in this equation, the units of the resulting power will obviously be dependent on the units of the other parameters. It will often be desirable to work with the power in either horsepower or kilowatts, and appropriate conversion factors should be used.

Since meshed gears are reasonably efficient, with losses of less than 2 percent, the power is generally treated as constant through the mesh. Consequently, with a pair of meshed gears, Eq. (13-33) will give the same power regardless of which gear is used for d and ω .

Gear data is often tabulated using *pitch-line velocity*, which is the linear velocity of a point on the gear at the radius of the pitch circle; thus $V = (d/2)\omega$. Converting this to customary units gives

$$V = \pi dn/12 \quad (13-34)$$

where V = pitch-line velocity, ft/min

d = gear diameter, in

n = gear speed, rev/min

Many gear design problems will specify the power and speed, so it is convenient to solve Eq. (13-33) for W_t . With the pitch-line velocity and appropriate conversion factors incorporated, Eq. (13-33) can be rearranged and expressed in customary units as

$$W_t = 33\,000 \frac{H}{V} \quad (13-35)$$

where W_t = transmitted load, lbf

H = power, hp

V = pitch-line velocity, ft/min

The corresponding equation in SI is

$$W_t = \frac{60\,000H}{\pi dn} \quad (13-36)$$

where W_t = transmitted load, kN

H = power, kW

d = gear diameter, mm

n = speed, rev/min

EXAMPLE 13-7

Pinion 2 in Fig. 13-34a runs at 1750 rev/min and transmits 2.5 kW to idler gear 3. The teeth are cut on the 20° full-depth system and have a module of $m = 2.5$ mm. Draw a free-body diagram of gear 3 and show all the forces that act upon it.

Solution The pitch diameters of gears 2 and 3 are

$$d_2 = N_2 m = 20(2.5) = 50 \text{ mm}$$

$$d_3 = N_3 m = 50(2.5) = 125 \text{ mm}$$

From Eq. (13-36) we find the transmitted load to be

$$W_t = \frac{60\,000H}{\pi d_2 n} = \frac{60\,000(2.5)}{\pi(50)(1750)} = 0.546 \text{ kN}$$

Thus, the tangential force of gear 2 on gear 3 is $F_{23}^t = 0.546$ kN, as shown in Fig. 13-34b. Therefore

$$F_{23}^r = F_{23}^t \tan 20^\circ = (0.546) \tan 20^\circ = 0.199 \text{ kN}$$

and so

$$F_{23} = \frac{F_{23}^t}{\cos 20^\circ} = \frac{0.546}{\cos 20^\circ} = 0.581 \text{ kN}$$

Since gear 3 is an idler, it transmits no power (torque) to its shaft, and so the tangential reaction of gear 4 on gear 3 is also equal to W_t . Therefore

$$F_{43}^t = 0.546 \text{ kN} \quad F_{43}^r = 0.199 \text{ kN} \quad F_{43} = 0.581 \text{ kN}$$

and the directions are shown in Fig. 13-34b.

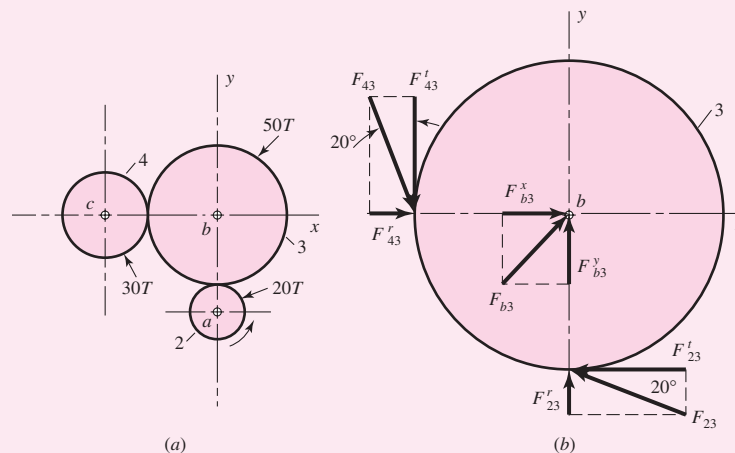
The shaft reactions in the x and y directions are

$$F_{b3}^x = -(F_{23}^t + F_{43}^r) = -(-0.546 + 0.199) = 0.347 \text{ kN}$$

$$F_{b3}^y = -(F_{23}^r + F_{43}^t) = -(0.199 - 0.546) = 0.347 \text{ kN}$$

Figure 13-34

A gear train containing an idler gear. (a) The gear train. (b) Free-body of the idler gear.



The resultant shaft reaction is

$$F_{b3} = \sqrt{(0.347)^2 + (0.347)^2} = 0.491 \text{ kN}$$

These are shown on the figure.

13–15 Force Analysis—Bevel Gearing

In determining shaft and bearing loads for bevel-gear applications, the usual practice is to use the tangential or transmitted load that would occur if all the forces were concentrated at the midpoint of the tooth. While the actual resultant occurs somewhere between the midpoint and the large end of the tooth, there is only a small error in making this assumption. For the transmitted load, this gives

$$W_t = \frac{T}{r_{av}} \quad (13-37)$$

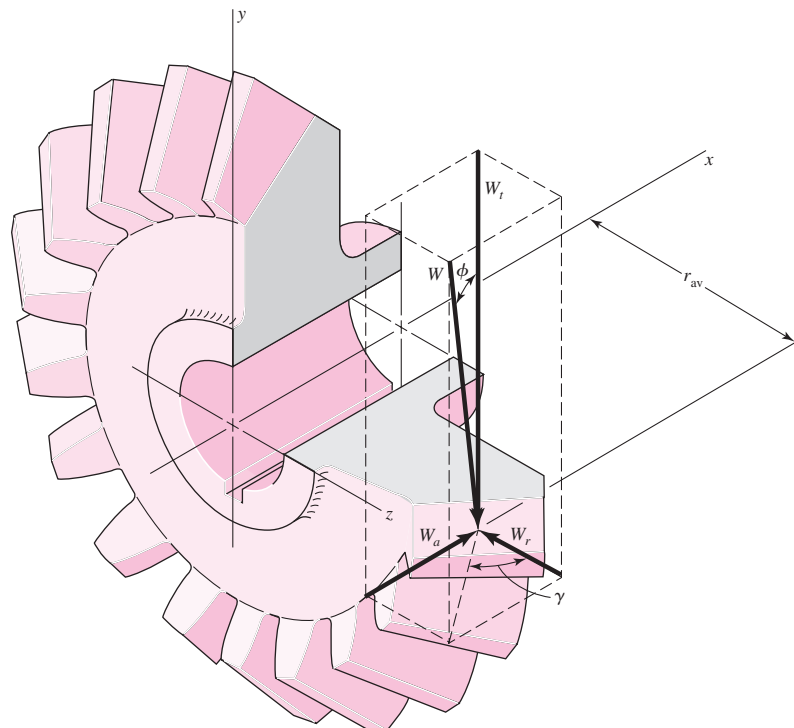
where T is the torque and r_{av} is the pitch radius at the midpoint of the tooth for the gear under consideration.

The forces acting at the center of the tooth are shown in Fig. 13–35. The resultant force W has three components: a tangential force W_t , a radial force W_r , and an axial force W_a . From the trigonometry of the figure,

$$\begin{aligned} W_r &= W_t \tan \phi \cos \gamma \\ W_a &= W_t \tan \phi \sin \gamma \end{aligned} \quad (13-38)$$

Figure 13–35

Bevel-gear tooth forces.



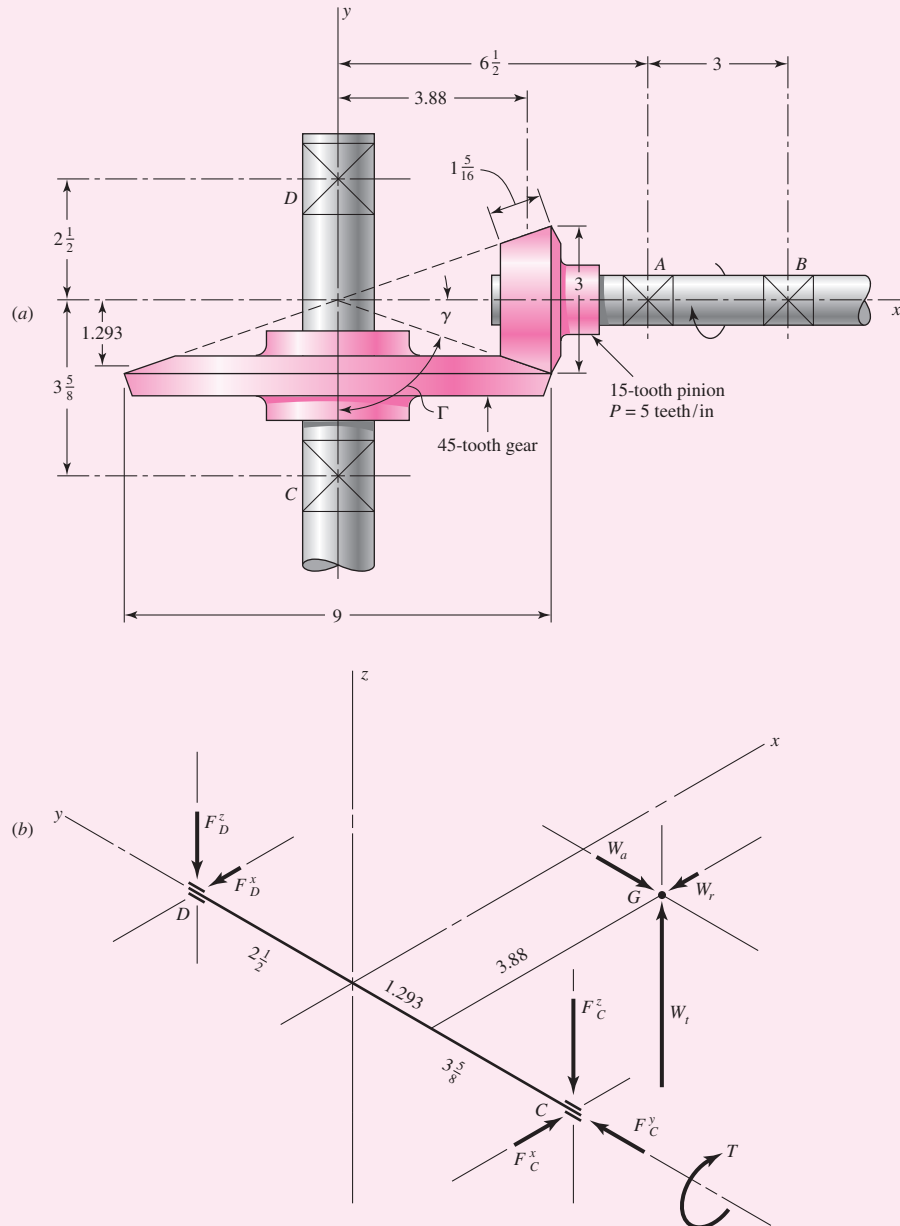
The three forces W_t , W_r , and W_a are at right angles to each other and can be used to determine the bearing loads by using the methods of statics.

EXAMPLE 13-8

The bevel pinion in Fig. 13-36a rotates at 600 rev/min in the direction shown and transmits 5 hp to the gear. The mounting distances, the location of all bearings, and the average pitch radii of the pinion and gear are shown in the figure. For simplicity, the teeth have been replaced by pitch cones. Bearings A and C should take the thrust loads. Find the bearing forces on the gearshaft.

Figure 13-36

- (a) Bevel-gear set of Ex. 13-8.
- (b) Free body diagram of shaft CD. Dimensions in inches.



Solution The pitch angles are

$$\gamma = \tan^{-1}\left(\frac{3}{9}\right) = 18.4^\circ \quad \Gamma = \tan^{-1}\left(\frac{9}{3}\right) = 71.6^\circ$$

The pitch-line velocity corresponding to the average pitch radius is

$$V = \frac{2\pi r_P n}{12} = \frac{2\pi(1.293)(600)}{12} = 406 \text{ ft/min}$$

Therefore the transmitted load is

$$W_t = \frac{33\,000H}{V} = \frac{(33\,000)(5)}{406} = 406 \text{ lbf}$$

which acts in the positive z direction, as shown in Fig. 13–36*b*. We next have

$$W_r = W_t \tan \phi \cos \Gamma = 406 \tan 20^\circ \cos 71.6^\circ = 46.6 \text{ lbf}$$

$$W_a = W_t \tan \phi \sin \Gamma = 406 \tan 20^\circ \sin 71.6^\circ = 140 \text{ lbf}$$

where W_r is in the $-x$ direction and W_a is in the $-y$ direction, as illustrated in the isometric sketch of Fig. 13–36*b*.

In preparing to take a sum of the moments about bearing D , define the position vector from D to G as

$$\mathbf{R}_G = 3.88\mathbf{i} - (2.5 + 1.293)\mathbf{j} = 3.88\mathbf{i} - 3.793\mathbf{j}$$

We shall also require a vector from D to C :

$$\mathbf{R}_C = -(2.5 + 3.625)\mathbf{j} = -6.125\mathbf{j}$$

Then, summing moments about D gives

$$\mathbf{R}_G \times \mathbf{W} + \mathbf{R}_C \times \mathbf{F}_C + \mathbf{T} = \mathbf{0} \quad (1)$$

When we place the details in Eq. (1), we get

$$\begin{aligned} (3.88\mathbf{i} - 3.793\mathbf{j}) \times (-46.6\mathbf{i} - 140\mathbf{j} + 406\mathbf{k}) \\ + (-6.125\mathbf{j}) \times (F_C^x\mathbf{i} + F_C^y\mathbf{j} + F_C^z\mathbf{k}) + T\mathbf{j} = \mathbf{0} \end{aligned} \quad (2)$$

After the two cross products are taken, the equation becomes

$$(-1540\mathbf{i} - 1575\mathbf{j} - 720\mathbf{k}) + (-6.125F_C^z\mathbf{i} + 6.125F_C^x\mathbf{k}) + T\mathbf{j} = \mathbf{0}$$

from which

$$\mathbf{T} = 1575\mathbf{j} \text{ lbf} \cdot \text{in} \quad F_C^x = 118 \text{ lbf} \quad F_C^z = -251 \text{ lbf} \quad (3)$$

Now sum the forces to zero. Thus

$$\mathbf{F}_D + \mathbf{F}_C + \mathbf{W} = \mathbf{0} \quad (4)$$

When the details are inserted, Eq. (4) becomes

$$(F_D^x\mathbf{i} + F_D^z\mathbf{k}) + (118\mathbf{i} + F_C^y\mathbf{j} - 251\mathbf{k}) + (-46.6\mathbf{i} - 140\mathbf{j} + 406\mathbf{k}) = \mathbf{0} \quad (5)$$

First we see that $F_C^y = 140$ lbf, and so

Answer
$$\mathbf{F}_C = 118\mathbf{i} + 140\mathbf{j} - 251\mathbf{k} \text{ lbf}$$

Then, from Eq. (5),

Answer
$$\mathbf{F}_D = -71.4\mathbf{i} - 155\mathbf{k} \text{ lbf}$$

These are all shown in Fig. 13–36*b* in the proper directions. The analysis for the pinion shaft is quite similar.

13–16 Force Analysis—Helical Gearing

Figure 13–37 is a three-dimensional view of the forces acting against a helical-gear tooth. The point of application of the forces is in the pitch plane and in the center of the gear face. From the geometry of the figure, the three components of the total (normal) tooth force W are

$$\begin{aligned} W_r &= W \sin \phi_n \\ W_t &= W \cos \phi_n \cos \psi \\ W_a &= W \cos \phi_n \sin \psi \end{aligned} \tag{13-39}$$

where W = total force

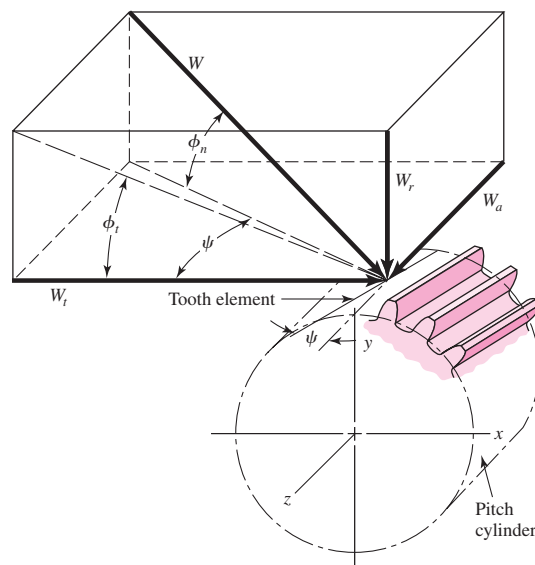
W_r = radial component

W_t = tangential component, also called transmitted load

W_a = axial component, also called thrust load

Figure 13–37

Tooth forces acting on a righthand helical gear.



Usually W_t is given and the other forces are desired. In this case, it is not difficult to discover that

$$\begin{aligned}W_r &= W_t \tan \phi_t \\W_a &= W_t \tan \psi \\W &= \frac{W_t}{\cos \phi_n \cos \psi}\end{aligned}\tag{13-40}$$

EXAMPLE 13-9

In Fig. 13-38 a 1-hp electric motor runs at 1800 rev/min in the clockwise direction, as viewed from the positive x axis. Keyed to the motor shaft is an 18-tooth helical pinion having a normal pressure angle of 20° , a helix angle of 30° , and a normal diametral pitch of 12 teeth/in. The hand of the helix is shown in the figure. Make a three-dimensional sketch of the motor shaft and pinion, and show the forces acting on the pinion and the bearing reactions at A and B . The thrust should be taken out at A .

Solution From Eq. (13-19) we find

$$\phi_t = \tan^{-1} \frac{\tan \phi_n}{\cos \psi} = \tan^{-1} \frac{\tan 20^\circ}{\cos 30^\circ} = 22.8^\circ$$

Also, $P_t = P_n \cos \psi = 12 \cos 30^\circ = 10.39$ teeth/in. Therefore the pitch diameter of the pinion is $d_p = 18/10.39 = 1.732$ in. The pitch-line velocity is

$$V = \frac{\pi dn}{12} = \frac{\pi(1.732)(1800)}{12} = 816 \text{ ft/min}$$

The transmitted load is

$$W_t = \frac{33\,000H}{V} = \frac{(33\,000)(1)}{816} = 40.4 \text{ lbf}$$

From Eq. (13-40) we find

$$W_r = W_t \tan \phi_t = (40.4) \tan 22.8^\circ = 17.0 \text{ lbf}$$

$$W_a = W_t \tan \psi = (40.4) \tan 30^\circ = 23.3 \text{ lbf}$$

$$W = \frac{W_t}{\cos \phi_n \cos \psi} = \frac{40.4}{\cos 20^\circ \cos 30^\circ} = 49.6 \text{ lbf}$$

Figure 13-38

The motor and gear train of Ex. 13-9.

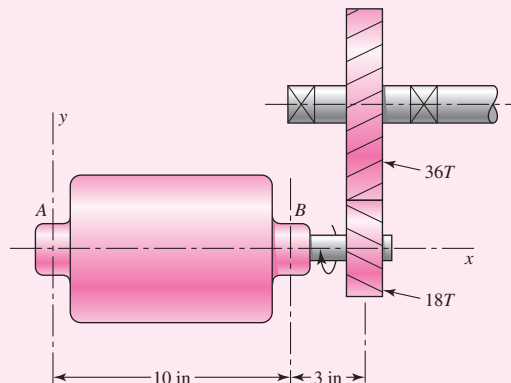
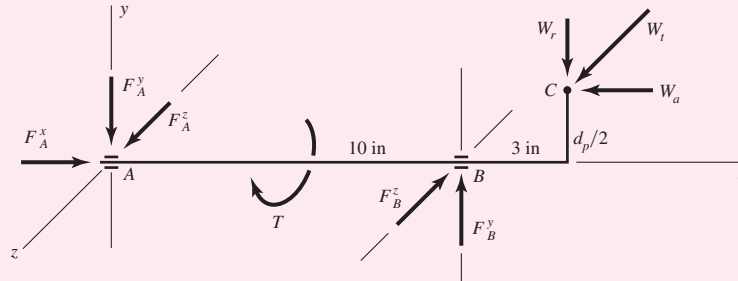


Figure 13-39

Free body diagram of motor shaft of Ex. 13-9.



These three forces, W_r in the $-y$ direction, W_a in the $-x$ direction, and W_t in the $+z$ direction, are shown acting at point C in Fig. 13-39. We assume bearing reactions at A and B as shown. Then $F_A^x = W_a = 23.3$ lbf. Taking moments about the z axis,

$$-(17.0)(13) + (23.3) \left(\frac{1.732}{2} \right) + 10F_B^y = 0$$

or $F_B^y = 20.1$ lbf. Summing forces in the y direction then gives $F_A^y = 3.1$ lbf. Taking moments about the y axis, next

$$10F_B^z - (40.4)(13) = 0$$

or $F_B^z = 52.5$ lbf. Summing forces in the z direction and solving gives $F_A^z = 12.1$ lbf. Also, the torque is $T = W_t d_p / 2 = (40.4)(1.732/2) = 35$ lbf · in.

For comparison, solve the problem again using vectors. The force at C is

$$\mathbf{W} = -23.3\mathbf{i} - 17.0\mathbf{j} + 40.4\mathbf{k} \text{ lbf}$$

Position vectors to B and C from origin A are

$$\mathbf{R}_B = 10\mathbf{i} \quad \mathbf{R}_C = 13\mathbf{i} + 0.866\mathbf{j}$$

Taking moments about A , we have

$$\mathbf{R}_B \times \mathbf{F}_B + \mathbf{T} + \mathbf{R}_C \times \mathbf{W} = \mathbf{0}$$

Using the directions assumed in Fig. 13-39 and substituting values gives

$$10\mathbf{i} \times (F_B^y\mathbf{j} - F_B^z\mathbf{k}) - T\mathbf{i} + (13\mathbf{i} + 0.866\mathbf{j}) \times (-23.3\mathbf{i} - 17.0\mathbf{j} + 40.4\mathbf{k}) = \mathbf{0}$$

When the cross products are formed, we get

$$(10F_B^y\mathbf{k} + 10F_B^z\mathbf{j}) - T\mathbf{i} + (35\mathbf{i} - 525\mathbf{j} - 201\mathbf{k}) = \mathbf{0}$$

whence $T = 35$ lbf · in, $F_B^y = 20.1$ lbf, and $F_B^z = 52.5$ lbf.

Next,

$$\mathbf{F}_A = -\mathbf{F}_B - \mathbf{W}, \text{ and so } \mathbf{F}_A = 23.3\mathbf{i} - 3.1\mathbf{j} + 12.1\mathbf{k} \text{ lbf.}$$

13-17 Force Analysis—Worm Gearing

If friction is neglected, then the only force exerted by the gear will be the force W , shown in Fig. 13-40, having the three orthogonal components W^x , W^y , and W^z . From the geometry of the figure, we see that

$$\begin{aligned}W^x &= W \cos \phi_n \sin \lambda \\W^y &= W \sin \phi_n \\W^z &= W \cos \phi_n \cos \lambda\end{aligned}\tag{13-41}$$

We now use the subscripts W and G to indicate forces acting against the worm and gear, respectively. We note that W^y is the separating, or radial, force for both the worm and the gear. The tangential force on the worm is W^x and is W^z on the gear, assuming a 90° shaft angle. The axial force on the worm is W^z , and on the gear, W^x . Since the gear forces are opposite to the worm forces, we can summarize these relations by writing

$$\begin{aligned}W_{Wt} &= -W_{Ga} = W^x \\W_{Wr} &= -W_{Gr} = W^y \\W_{Wa} &= -W_{Gt} = W^z\end{aligned}\tag{13-42}$$

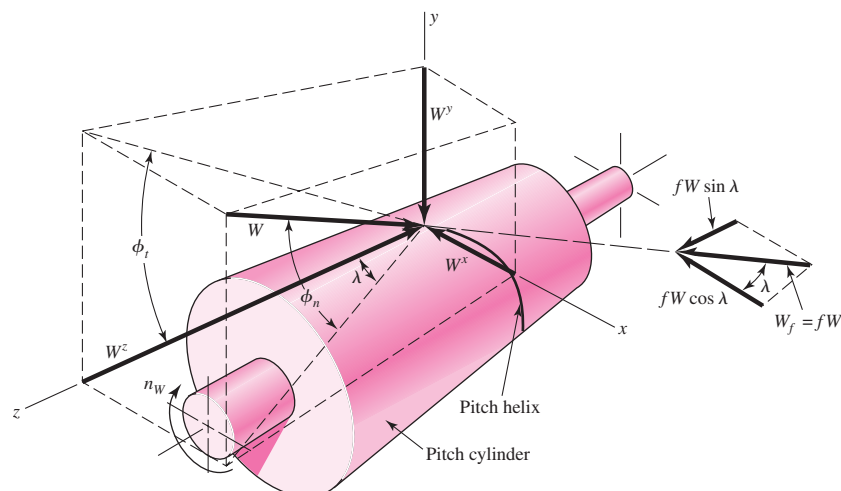
It is helpful in using Eq. (13-41) and also Eq. (13-42) to observe that *the gear axis is parallel to the x direction and the worm axis is parallel to the z direction* and that we are employing a right-handed coordinate system.

In our study of spur-gear teeth we have learned that the motion of one tooth relative to the mating tooth is primarily a rolling motion; in fact, when contact occurs at the pitch point, the motion is pure rolling. In contrast, the relative motion between worm and worm-gear teeth is pure sliding, and so we must expect that friction plays an important role in the performance of worm gearing. By introducing a coefficient of friction f , we can develop another set of relations similar to those of Eq. (13-41). In Fig. 13-40 we see that the force W acting normal to the worm-tooth profile produces a frictional force $W_f = fW$, having a component $fW \cos \lambda$ in the negative x direction and another component $fW \sin \lambda$ in the positive z direction. Equation (13-41) therefore becomes

$$\begin{aligned}W^x &= W(\cos \phi_n \sin \lambda + f \cos \lambda) \\W^y &= W \sin \phi_n \\W^z &= W(\cos \phi_n \cos \lambda - f \sin \lambda)\end{aligned}\tag{13-43}$$

Figure 13-40

Drawing of the pitch cylinder of a worm, showing the forces exerted upon it by the worm gear.



Equation (13–42), of course, still applies.

Inserting $-W_{Gt}$ from Eq. (13–42) for W^z in Eq. (13–43) and multiplying both sides by f , we find the frictional force W_f to be

$$W_f = fW = \frac{fW_{Gt}}{f \sin \lambda - \cos \phi_n \cos \lambda} \quad (13-44)$$

A useful relation between the two tangential forces, W_{Wt} and W_{Gt} , can be obtained by equating the first and third parts of Eqs. (13–42) and (13–43) and eliminating W . The result is

$$W_{Wt} = W_{Gt} \frac{\cos \phi_n \sin \lambda + f \cos \lambda}{f \sin \lambda - \cos \phi_n \cos \lambda} \quad (13-45)$$

Efficiency η can be defined by using the equation

$$\eta = \frac{W_{Wt}(\text{without friction})}{W_{Wt}(\text{with friction})} \quad (a)$$

Substitute Eq. (13–45) with $f = 0$ in the numerator of Eq. (a) and the same equation in the denominator. After some rearranging, you will find the efficiency to be

$$\eta = \frac{\cos \phi_n - f \tan \lambda}{\cos \phi_n + f \cot \lambda} \quad (13-46)$$

Selecting a typical value of the coefficient of friction, say $f = 0.05$, and the pressure angles shown in Table 13–6, we can use Eq. (13–46) to get some useful design information. Solving this equation for helix angles from 1 to 30° gives the interesting results shown in Table 13–6.

Many experiments have shown that the coefficient of friction is dependent on the relative or sliding velocity. In Fig. 13–41, V_G is the pitch-line velocity of the gear and V_W the pitch-line velocity of the worm. Vectorially, $\mathbf{V}_W = \mathbf{V}_G + \mathbf{V}_S$; consequently, the sliding velocity is

$$V_S = \frac{V_W}{\cos \lambda} \quad (13-47)$$

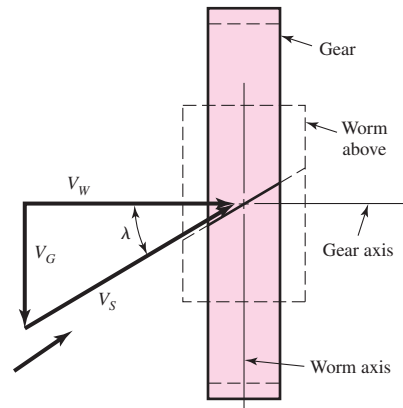
Table 13–6

Efficiency of Worm
Gearsets for $f = 0.05$

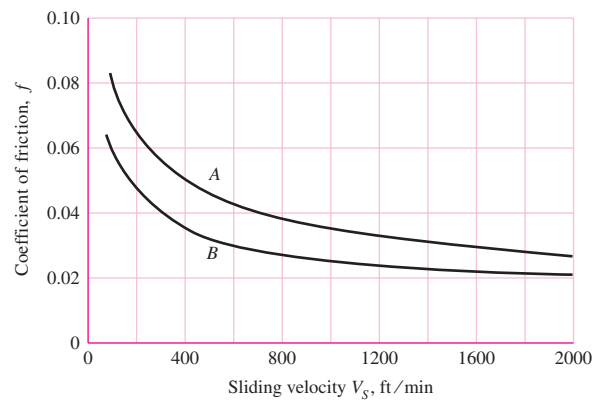
Helix Angle ψ , deg	Efficiency η , %
1.0	25.2
2.5	45.7
5.0	62.0
7.5	71.3
10.0	76.6
15.0	82.7
20.0	85.9
30.0	89.1

Figure 13-41

Velocity components in worm gearing.

**Figure 13-42**

Representative values of the coefficient of friction for worm gearing. These values are based on good lubrication. Use curve *B* for high-quality materials, such as a case-hardened steel worm mating with a phosphor-bronze gear. Use curve *A* when more friction is expected, as with a cast-iron worm mating with a cast-iron worm gear.



Published values of the coefficient of friction vary as much as 20 percent, undoubtedly because of the differences in surface finish, materials, and lubrication. The values on the chart of Fig. 13-42 are representative and indicate the general trend.

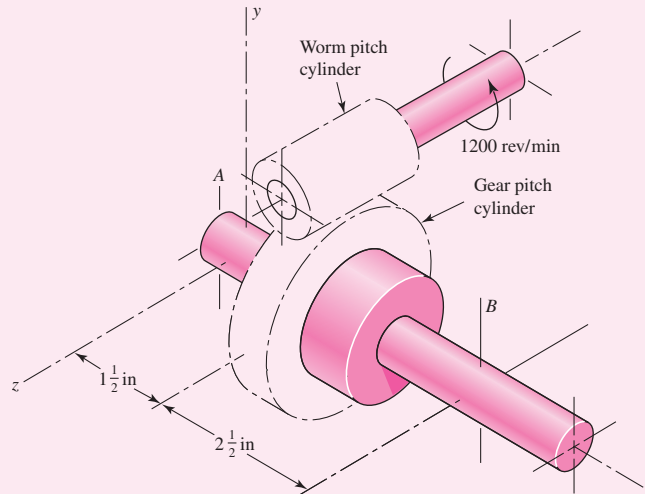
EXAMPLE 13-10

A 2-tooth right-hand worm transmits 1 hp at 1200 rev/min to a 30-tooth worm gear. The gear has a transverse diametral pitch of 6 teeth/in and a face width of 1 in. The worm has a pitch diameter of 2 in and a face width of $2\frac{1}{2}$ in. The normal pressure angle is $14\frac{1}{2}^\circ$. The materials and quality of work needed are such that curve *B* of Fig. 13-42 should be used to obtain the coefficient of friction.

- Find the axial pitch, the center distance, the lead, and the lead angle.
- Figure 13-43 is a drawing of the worm gear oriented with respect to the coordinate system described earlier in this section; the gear is supported by bearings *A* and *B*. Find the forces exerted by the bearings against the worm-gear shaft, and the output torque.

698 Mechanical Engineering Design

Figure 13-43

 The pitch cylinders of
 the worm gear train of
 Ex. 13-10.


Solution (a) The axial pitch is the same as the transverse circular pitch of the gear, which is

$$\text{Answer} \quad p_x = p_t = \frac{\pi}{P} = \frac{\pi}{6} = 0.5236 \text{ in}$$

The pitch diameter of the gear is $d_G = N_G/P = 30/6 = 5$ in. Therefore, the center distance is

$$\text{Answer} \quad C = \frac{d_W + d_G}{2} = \frac{2 + 5}{2} = 3.5 \text{ in}$$

From Eq. (13-27), the lead is

$$L = p_x N_W = (0.5236)(2) = 1.0472 \text{ in}$$

Answer Also using Eq. (13-28), find

$$\text{Answer} \quad \lambda = \tan^{-1} \frac{L}{\pi d_W} = \tan^{-1} \frac{1.0472}{\pi(2)} = 9.46^\circ$$

(b) Using the right-hand rule for the rotation of the worm, you will see that your thumb points in the positive z direction. Now use the bolt-and-nut analogy (the worm is right-handed, as is the screw thread of a bolt), and turn the bolt clockwise with the right hand while preventing nut rotation with the left. The nut will move axially along the bolt toward your right hand. Therefore the surface of the gear (Fig. 13-43) in contact with the worm will move in the negative z direction. Thus, the gear rotates clockwise about x , with your right thumb pointing in the negative x direction.

The pitch-line velocity of the worm is

$$V_W = \frac{\pi d_W n_W}{12} = \frac{\pi(2)(1200)}{12} = 628 \text{ ft/min}$$

The speed of the gear is $n_G = (\frac{2}{30})(1200) = 80$ rev/min. Therefore the pitch-line velocity of the gear is

$$V_G = \frac{\pi d_G n_G}{12} = \frac{\pi(5)(80)}{12} = 105 \text{ ft/min}$$

Then, from Eq. (13–47), the sliding velocity V_S is found to be

$$V_S = \frac{V_W}{\cos \lambda} = \frac{628}{\cos 9.46^\circ} = 637 \text{ ft/min}$$

Getting to the forces now, we begin with the horsepower formula

$$W_{Wt} = \frac{33\,000H}{V_W} = \frac{(33\,000)(1)}{628} = 52.5 \text{ lbf}$$

This force acts in the negative x direction, the same as in Fig. 13–40. Using Fig. 13–42, we find $f = 0.03$. Then, the first equation of group (13–42) and (13–43) gives

$$\begin{aligned} W &= \frac{W^x}{\cos \phi_n \sin \lambda + f \cos \lambda} \\ &= \frac{52.5}{\cos 14.5^\circ \sin 9.46^\circ + 0.03 \cos 9.46^\circ} = 278 \text{ lbf} \end{aligned}$$

Also, from Eq. (13–43),

$$\begin{aligned} W^y &= W \sin \phi_n = 278 \sin 14.5^\circ = 69.6 \text{ lbf} \\ W^z &= W(\cos \phi_n \cos \lambda - f \sin \lambda) \\ &= 278(\cos 14.5^\circ \cos 9.46^\circ - 0.03 \sin 9.46^\circ) = 264 \text{ lbf} \end{aligned}$$

We now identify the components acting on the gear as

$$\begin{aligned} W_{Ga} &= -W^x = 52.5 \text{ lbf} \\ W_{Gr} &= -W^y = -69.6 \text{ lbf} \\ W_{Gt} &= -W^z = -264 \text{ lbf} \end{aligned}$$

At this point a three-dimensional line drawing should be made in order to simplify the work to follow. An isometric sketch, such as the one of Fig. 13–44, is easy to make and will help you to avoid errors.

We shall make B a thrust bearing in order to place the gearshaft in compression. Thus, summing forces in the x direction gives

$$\text{Answer} \quad F_B^x = -52.5 \text{ lbf}$$

Taking moments about the z axis, we have

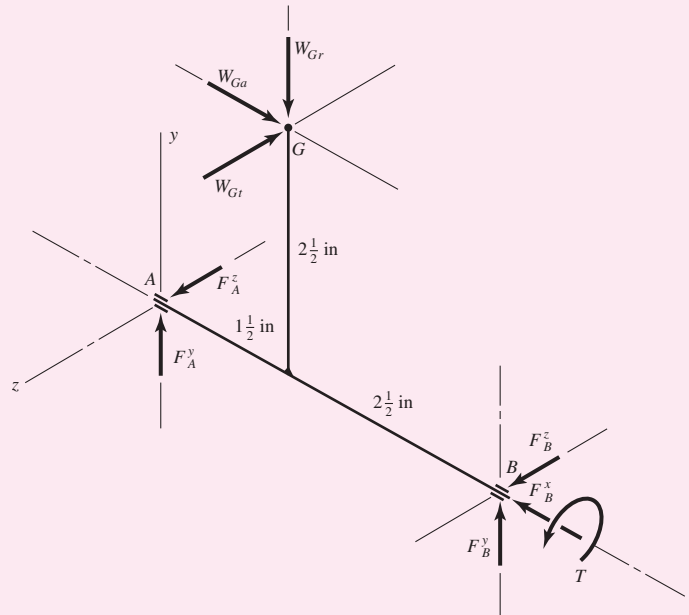
$$\text{Answer} \quad -(52.5)(2.5) - (69.6)(1.5) + 4F_B^y = 0 \quad F_B^y = 58.9 \text{ lbf}$$

Taking moments about the y axis,

$$\text{Answer} \quad (264)(1.5) - 4F_B^z = 0 \quad F_B^z = 99 \text{ lbf}$$

Figure 13-44

An isometric sketch used in
Ex. 13-10.



These three components are now inserted on the sketch as shown at *B* in Fig. 13-44. Summing forces in the *y* direction,

Answer
$$-69.6 + 58.9 + F_A^y = 0 \quad F_A^y = 10.7 \text{ lbf}$$

Similarly, summing forces in the *z* direction,

Answer
$$-264 + 99 + F_A^z = 0 \quad F_A^z = 165 \text{ lbf}$$

These two components can now be placed at *A* on the sketch. We still have one more equation to write. Summing moments about *x*,

Answer
$$-(264)(2.5) + T = 0 \quad T = 660 \text{ lbf} \cdot \text{in}$$

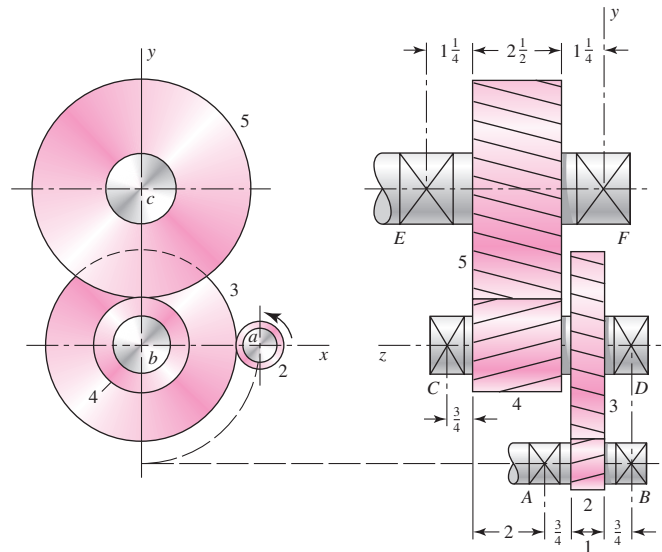
It is because of the frictional loss that this output torque is less than the product of the gear ratio and the input torque.

PROBLEMS

- 13-1** A 17-tooth spur pinion has a diametral pitch of 8 teeth/in, runs at 1120 rev/min, and drives a gear at a speed of 544 rev/min. Find the number of teeth on the gear and the theoretical center-to-center distance.
- 13-2** A 15-tooth spur pinion has a module of 3 mm and runs at a speed of 1600 rev/min. The driven gear has 60 teeth. Find the speed of the driven gear, the circular pitch, and the theoretical center-to-center distance.
- 13-3** A spur gearset has a module of 4 mm and a velocity ratio of 2.80. The pinion has 20 teeth. Find the number of teeth on the driven gear, the pitch diameters, and the theoretical center-to-center distance.

- 13-4** A 21-tooth spur pinion mates with a 28-tooth gear. The diametral pitch is 3 teeth/in and the pressure angle is 20° . Make a drawing of the gears showing one tooth on each gear. Find and tabulate the following results: the addendum, dedendum, clearance, circular pitch, tooth thickness, and base-circle diameters; the lengths of the arc of approach, recess, and action; and the base pitch and contact ratio.
- 13-5** A 20° straight-tooth bevel pinion having 14 teeth and a diametral pitch of 6 teeth/in drives a 32-tooth gear. The two shafts are at right angles and in the same plane. Find:
- The cone distance
 - The pitch angles
 - The pitch diameters
 - The face width
- 13-6** A parallel helical gearset uses a 17-tooth pinion driving a 34-tooth gear. The pinion has a right-hand helix angle of 30° , a normal pressure angle of 20° , and a normal diametral pitch of 5 teeth/in. Find:
- The normal, transverse, and axial circular pitches
 - The normal base circular pitch
 - The transverse diametral pitch and the transverse pressure angle
 - The addendum, dedendum, and pitch diameter of each gear
- 13-7** A parallel helical gearset consists of a 19-tooth pinion driving a 57-tooth gear. The pinion has a left-hand helix angle of 20° , a normal pressure angle of $14\frac{1}{2}^\circ$, and a normal diametral pitch of 10 teeth/in. Find:
- The normal, transverse, and axial circular pitches
 - The transverse diametral pitch and the transverse pressure angle
 - The addendum, dedendum, and pitch diameter of each gear
- 13-8** For a spur gearset with $\phi = 20^\circ$, while avoiding interference, find:
- The smallest pinion tooth count that will run with itself
 - The smallest pinion tooth count at a ratio $m_G = 2.5$, and the largest gear tooth count possible with this pinion
 - The smallest pinion that will run with a rack
- 13-9** Repeat problem 13-8 for a helical gearset with $\phi_n = 20^\circ$ and $\psi = 30^\circ$.
- 13-10** The decision has been made to use $\phi_n = 20^\circ$, $P_t = 6$ teeth/in, and $\psi = 30^\circ$ for a 2:1 reduction. Choose a suitable pinion and gear tooth count to avoid interference.
- 13-11** Repeat Problem 13-10 with a 6:1 reduction.
- 13-12** By employing a pressure angle larger than standard, it is possible to use fewer pinion teeth, and hence obtain smaller gears without undercutting during machining. If the gears are spur gears, what is the smallest possible pressure angle ϕ_t that can be obtained without undercutting for a 9-tooth pinion to mesh with a rack?
- 13-13** A parallel-shaft gearset consists of an 18-tooth helical pinion driving a 32-tooth gear. The pinion has a left-hand helix angle of 25° , a normal pressure angle of 20° , and a normal module of 3 mm. Find:
- The normal, transverse, and axial circular pitches
 - The transverse module and the transverse pressure angle
 - The pitch diameters of the two gears
- 13-14** The double-reduction helical gearset shown in the figure is driven through shaft *a* at a speed of 900 rev/min. Gears 2 and 3 have a normal diametral pitch of 10 teeth/in, a 30° helix angle, and a

Problem 13–14
Dimensions in inches.

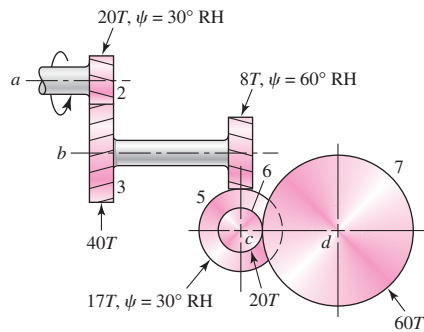


normal pressure angle of 20° . The second pair of gears in the train, gears 4 and 5, have a normal diametral pitch of 6 teeth/in, a 25° helix angle, and a normal pressure angle of 20° . The tooth numbers are: $N_2 = 14$, $N_3 = 54$, $N_4 = 16$, $N_5 = 36$. Find:

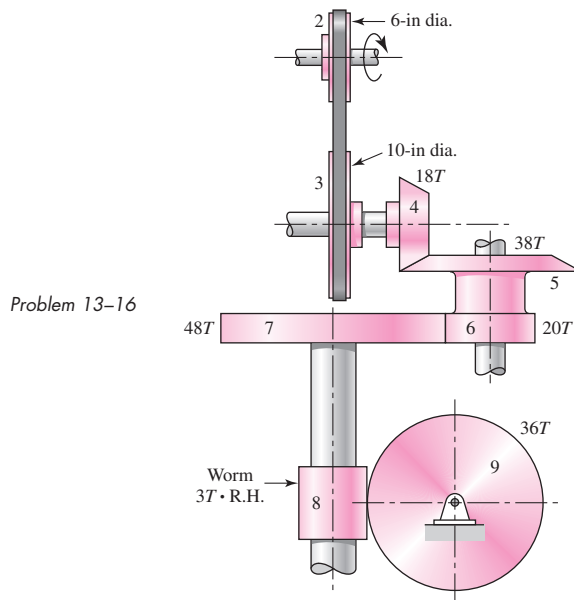
- The directions of the thrust force exerted by each gear upon its shaft
- The speed and direction of shaft c
- The center distance between shafts

13–15 Shaft a in the figure rotates at 600 rev/min in the direction shown. Find the speed and direction of rotation of shaft d .

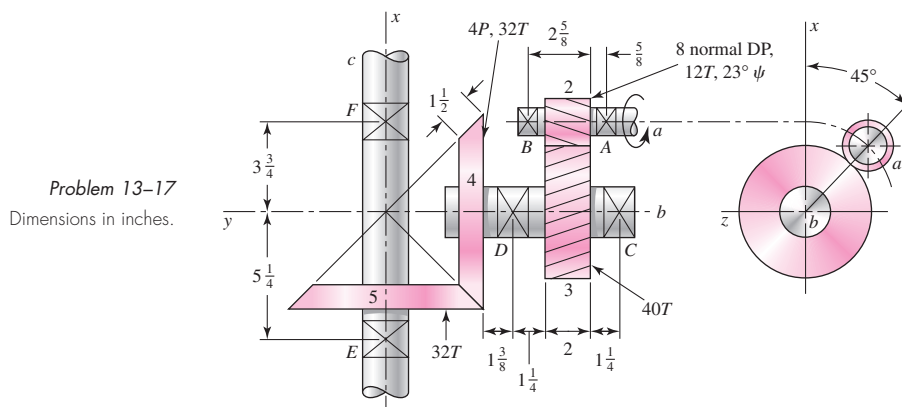
Problem 13–15



13–16 The mechanism train shown consists of an assortment of gears and pulleys to drive gear 9. Pulley 2 rotates at 1200 rev/min in the direction shown. Determine the speed and direction of rotation of gear 9.

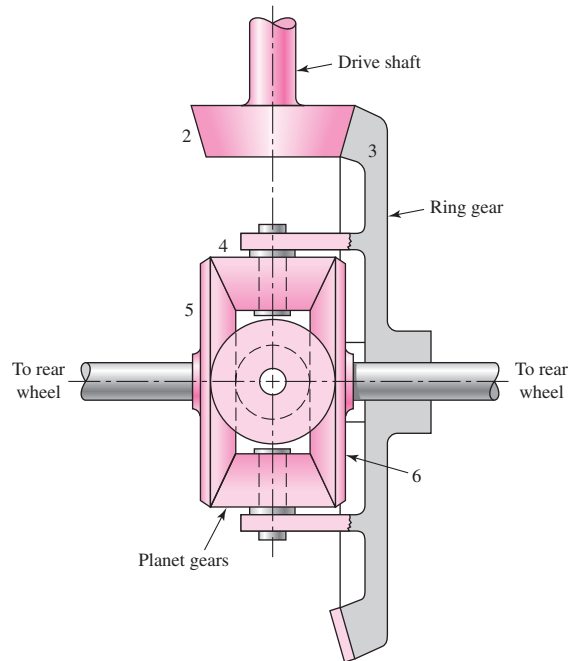


- 13–17** The figure shows a gear train consisting of a pair of helical gears and a pair of miter gears. The helical gears have a $17\frac{1}{2}^\circ$ normal pressure angle and a helix angle as shown. Find:
- The speed of shaft c
 - The distance between shafts a and b
 - The diameter of the miter gears



- 13–18** The tooth numbers for the automotive differential shown in the figure are $N_2 = 17$, $N_3 = 54$, $N_4 = 11$, $N_5 = N_6 = 16$. The drive shaft turns at 1200 rev/min.
- What are the wheel speeds if the car is traveling in a straight line on a good road surface?
 - Suppose the right wheel is jacked up and the left wheel resting on a good road surface. What is the speed of the right wheel?

Problem 13–18



(c) Suppose, with a rear-wheel drive vehicle, the auto is parked with the right wheel resting on a wet icy surface. Does the answer to part (b) give you any hint as to what would happen if you started the car and attempted to drive on?

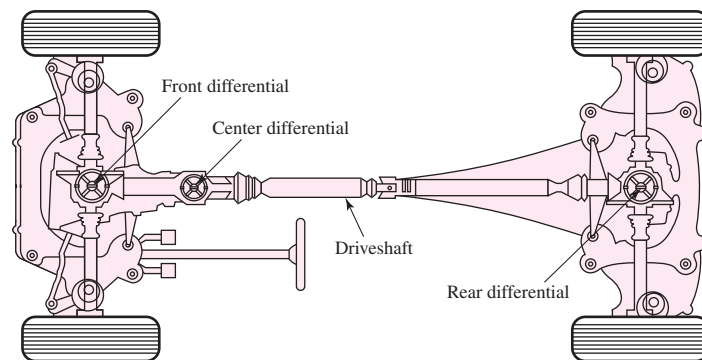
13–19

The figure illustrates an all-wheel drive concept using three differentials, one for the front axle, another for the rear, and the third connected to the drive shaft.

- (a) Explain why this concept may allow greater acceleration.
- (b) Suppose either the center of the rear differential, or both, can be locked for certain road conditions. Would either or both of these actions provide greater traction? Why?

Problem 13–19

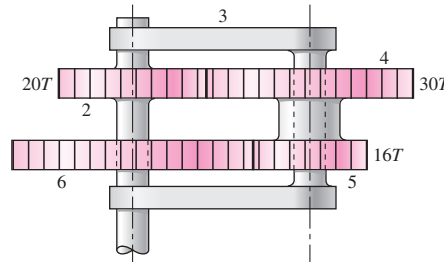
The Audi “Quattro concept,” showing the three differentials that provide permanent all-wheel drive. (Reprinted by permission of Audi of America, Inc.)



13–20

In the reverted planetary train illustrated, find the speed and direction of rotation of the arm if gear 2 is unable to rotate and gear 6 is driven at 12 rev/min in the clockwise direction.

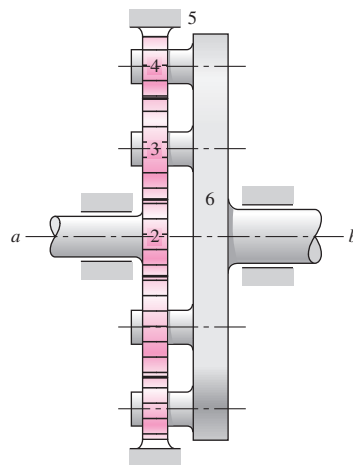
Problem 13–20



13–21 In the gear train of Prob. 13–20, let gear 2 be driven at 180 rev/min counterclockwise while gear 6 is held stationary. What is the speed and direction of rotation of the arm?

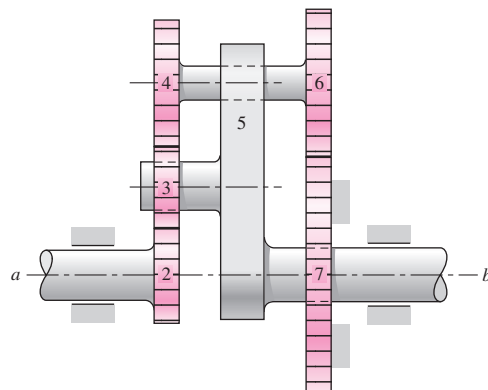
13–22 Tooth numbers for the gear train shown in the figure are $N_2 = 12$, $N_3 = 16$, and $N_4 = 12$. How many teeth must internal gear 5 have? Suppose gear 5 is fixed. What is the speed of the arm if shaft a rotates counterclockwise at 320 rev/min?

Problem 13–22

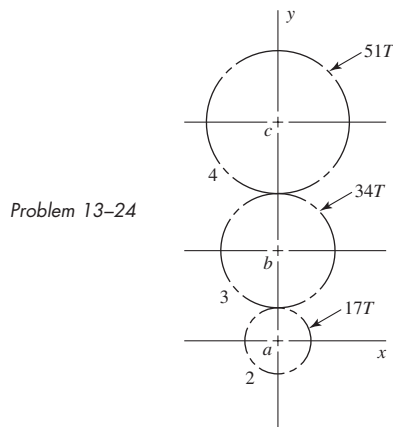


13–23 The tooth numbers for the gear train illustrated are $N_2 = 24$, $N_3 = 18$, $N_4 = 30$, $N_6 = 36$, and $N_7 = 54$. Gear 7 is fixed. If shaft b is turned through 5 revolutions, how many turns will shaft a make?

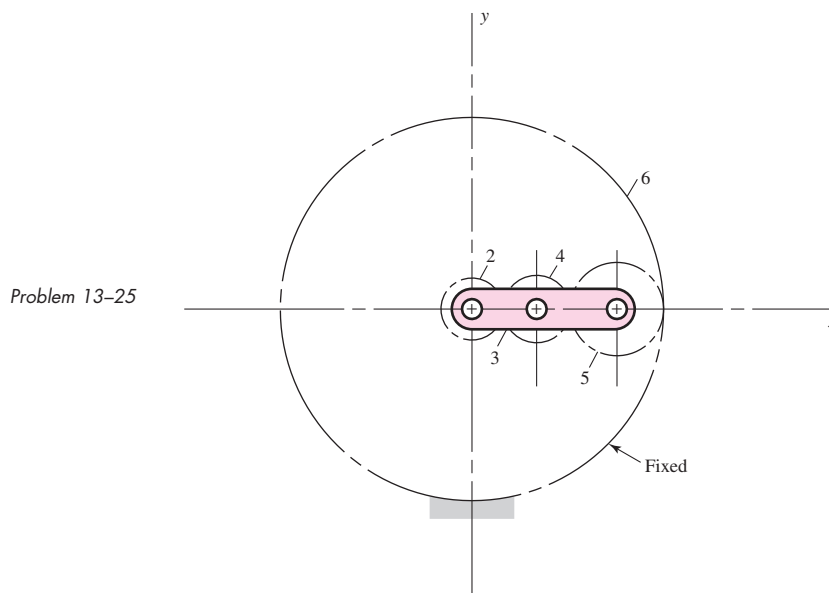
Problem 13–23



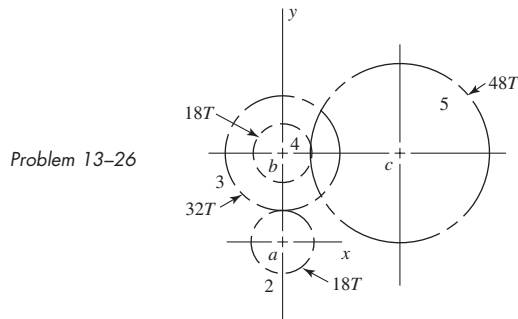
- 13-24** Shaft a in the figure has a power input of 75 kW at a speed of 1000 rev/min in the counter-clockwise direction. The gears have a module of 5 mm and a 20° pressure angle. Gear 3 is an idler.
- (a) Find the force F_{3b} that gear 3 exerts against shaft b .
- (b) Find the torque T_{4c} that gear 4 exerts on shaft c .



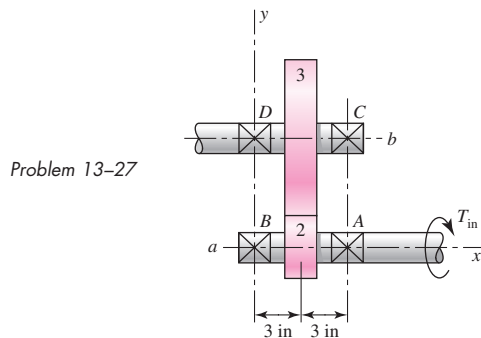
- 13-25** The $24T$ 6-pitch 20° pinion 2 shown in the figure rotates clockwise at 1000 rev/min and is driven at a power of 25 hp. Gears 4, 5, and 6 have 24, 36, and 144 teeth, respectively. What torque can arm 3 deliver to its output shaft? Draw free-body diagrams of the arm and of each gear and show all forces that act upon them.



- 13-26** The gears shown in the figure have a diametral pitch of 2 teeth per inch and a 20° pressure angle. The pinion rotates at 1800 rev/min clockwise and transmits 200 hp through the idler pair to gear 5 on shaft c . What forces do gears 3 and 4 transmit to the idler shaft?

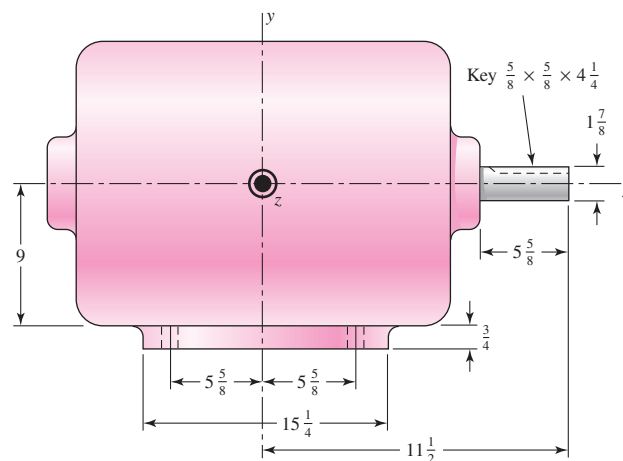
**13–27**

The figure shows a pair of shaft-mounted spur gears having a diametral pitch of 5 teeth/in with an 18-tooth 20° pinion driving a 45-tooth gear. The horsepower input is 32 maximum at 1800 rev/min. Find the direction and magnitude of the maximum forces acting on bearings A, B, C, and D.

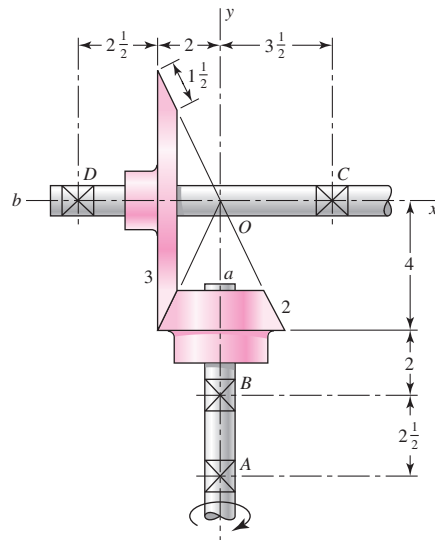
**13–28**

The figure shows the electric-motor frame dimensions for a 30-hp 900 rev/min motor. The frame is bolted to its support using four $\frac{3}{4}$ -in bolts spaced $11\frac{1}{4}$ in apart in the view shown and 14 in apart when viewed from the end of the motor. A 4 diametral pitch 20° spur pinion having 20 teeth and a face width of 2 in is keyed to the motor shaft. This pinion drives another gear whose axis is in the same xz plane. Determine the maximum shear and tensile forces on the mounting bolts based on 200 percent overload torque. Does the direction of rotation matter?

Problem 13–28
NEMA No. 364 frame; dimensions
in inches. The z axis is directed out
of the paper.

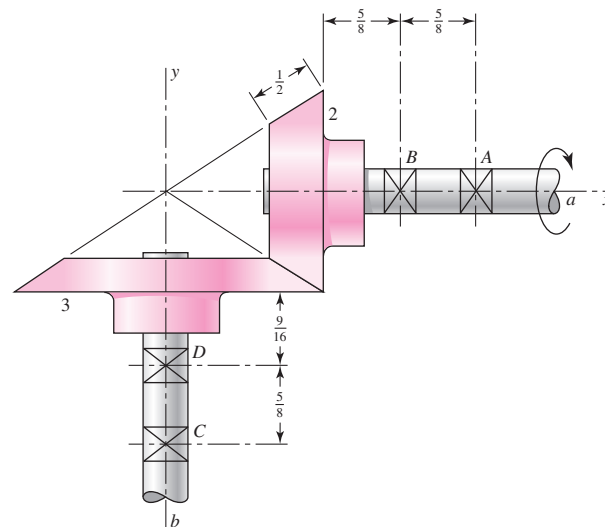


- 13–29** The figure shows a 16T 20° straight bevel pinion driving a 32T gear, and the location of the bearing centerlines. Pinion shaft *a* receives 2.5 hp at 240 rev/min. Determine the bearing reactions at *A* and *B* if *A* is to take both radial and thrust loads.



Problem 13–29
Dimensions in inches.

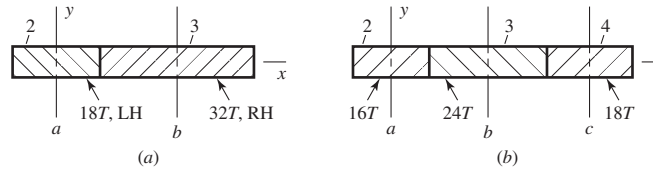
- 13–30** The figure shows a 10 diametral pitch 15-tooth 20° straight bevel pinion driving a 25-tooth gear. The transmitted load is 30 lbf. Find the bearing reactions at *C* and *D* on the output shaft if *D* is to take both radial and thrust loads.



Problem 13–30
Dimensions in inches.

- 13–31** The gears in the two trains shown in the figure have a normal diametral pitch of 5 teeth/in, a normal pressure angle of 20°, and a 30° helix angle. For both gear trains the transmitted load is 800 lbf. In part *a* the pinion rotates counterclockwise about the *y* axis. Find the force exerted by each gear in part *a* on its shaft.

Problem 13–31

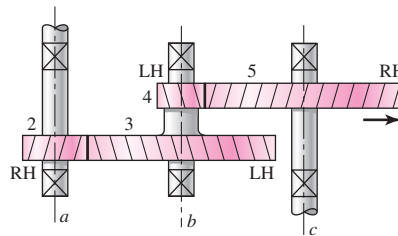
**13–32**

This is a continuation of Prob. 13–31. Here, you are asked to find the forces exerted by gears 2 and 3 on their shafts as shown in part *b*. Gear 2 rotates clockwise about the y axis. Gear 3 is an idler.

13–33

A gear train is composed of four helical gears with the three shaft axes in a single plane, as shown in the figure. The gears have a normal pressure angle of 20° and a 30° helix angle. Shaft *b* is an idler and the transmitted load acting on gear 3 is 500 lbf. The gears on shaft *b* both have a normal diametral pitch of 7 teeth/in and have 54 and 14 teeth, respectively. Find the forces exerted by gears 3 and 4 on shaft *b*.

Problem 13–33

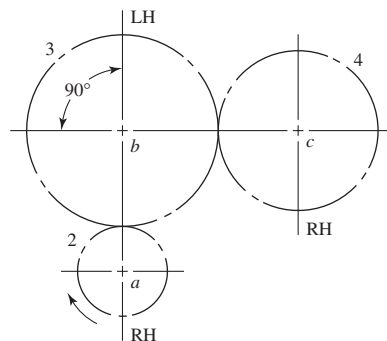
**13–34**

In the figure for Prob. 13–27, pinion 2 is to be a right-hand helical gear having a helix angle of 30° , a normal pressure angle of 20° , 16 teeth, and a normal diametral pitch of 6 teeth/in. A 25-hp motor drives shaft *a* at a speed of 1720 rev/min clockwise about the x axis. Gear 3 has 42 teeth. Find the reaction exerted by bearings *C* and *D* on shaft *b*. One of these bearings is to take both radial and thrust loads. This bearing should be selected so as to place the shaft in compression.

13–35

Gear 2, in the figure, has 16 teeth, a 20° transverse angle, a 15° helix angle, and a normal diametral pitch of 8 teeth/in. Gear 2 drives the idler on shaft *b*, which has 36 teeth. The driven gear on shaft *c* has 28 teeth. If the driver rotates at 1720 rev/min and transmits $7\frac{1}{2}$ hp, find the radial and thrust load on each shaft.

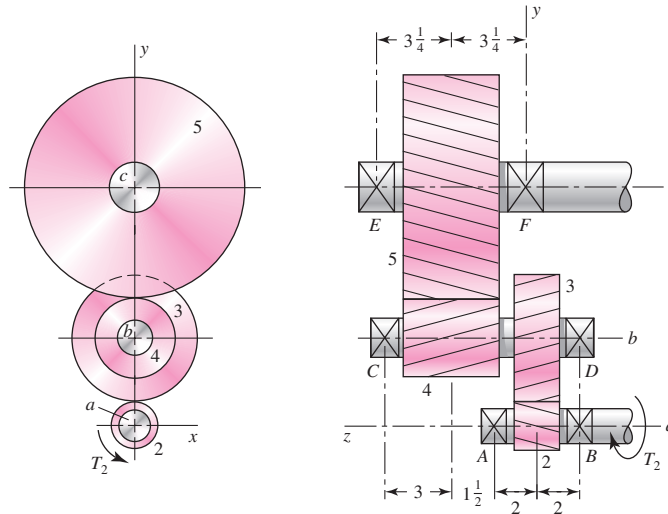
Problem 13–35

**13–36**

The figure shows a double-reduction helical gearset. Pinion 2 is the driver, and it receives a torque of 1200 lbf · in from its shaft in the direction shown. Pinion 2 has a normal diametral pitch of 8 teeth/in, 14 teeth, and a normal pressure angle of 20° and is cut right-handed with a helix angle

710 Mechanical Engineering Design

Problem 13–36
Dimensions in inches.

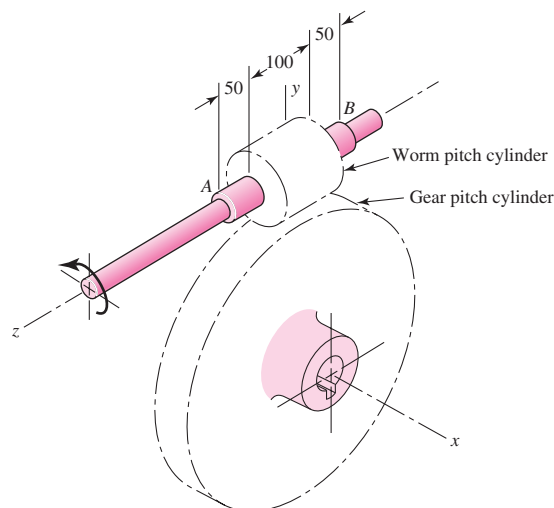


of 30° . The mating gear 3 on shaft b has 36 teeth. Gear 4, which is the driver for the second pair of gears in the train, has a normal diametral pitch of 5 teeth/in, 15 teeth, and a normal pressure angle of 20° and is cut left-handed with a helix angle of 15° . Mating gear 5 has 45 teeth. Find the magnitude and direction of the force exerted by the bearings C and D on shaft b if bearing C can take only radial load while bearing D is mounted to take both radial and thrust load.

13–37

A right-hand single-tooth hardened-steel (hardness not specified) worm has a catalog rating of 2000 W at 600 rev/min when meshed with a 48-tooth cast-iron gear. The axial pitch of the worm is 25 mm, the normal pressure angle is $14\frac{1}{2}^\circ$, the pitch diameter of the worm is 100 mm, and the face widths of the worm and gear are, respectively, 100 mm and 50 mm. The figure shows bearings A and B on the worm shaft symmetrically located with respect to the worm and 200 mm apart. Determine which should be the thrust bearing, and find the magnitudes and directions of the forces exerted by both bearings.

Problem 13–37
Dimensions in millimeters.



- 13–38** The hub diameter and projection for the gear of Prob. 13–37 are 100 and 37.5 mm, respectively. The face width of the gear is 50 mm. Locate bearings *C* and *D* on opposite sides, spacing *C* 10 mm from the gear on the hidden face (see figure) and *D* 10 mm from the hub face. Find the output torque and the magnitudes and directions of the forces exerted by the bearings on the gear-shaft.
- 13–39** A 2-tooth left-hand worm transmits $\frac{1}{2}$ hp at 900 rev/min to a 36-tooth gear having a transverse diametral pitch of 10 teeth/in. The worm has a normal pressure angle of $14\frac{1}{2}^\circ$, a pitch diameter of $1\frac{1}{2}$ in, and a face width of $1\frac{1}{2}$ in. Use a coefficient of friction of 0.05 and find the force exerted by the gear on the worm and the torque input. For the same geometry as shown for Prob. 13–37, the worm velocity is clockwise about the *z* axis.
- 13–40** Write a computer program that will analyze a spur gear or helical-mesh gear, accepting ϕ_n , ψ , P_t , N_p , and N_G ; compute m_G , d_p , d_G , p_t , p_n , p_x , and ϕ_t ; and give advice as to the smallest tooth count that will allow a pinion to run with itself without interference, run with its gear, and run with a rack. Also have it give the largest tooth count possible with the intended pinion.

14

Spur and Helical Gears

Chapter Outline

- 14-1** The Lewis Bending Equation **714**
- 14-2** Surface Durability **723**
- 14-3** AGMA Stress Equations **725**
- 14-4** AGMA Strength Equations **727**
- 14-5** Geometry Factors I and J (Z_I and Y_J) **731**
- 14-6** The Elastic Coefficient C_p (Z_E) **736**
- 14-7** Dynamic Factor K_v **736**
- 14-8** Overload Factor K_o **738**
- 14-9** Surface Condition Factor C_f (Z_R) **738**
- 14-10** Size Factor K_s **739**
- 14-11** Load-Distribution Factor K_m (K_H) **739**
- 14-12** Hardness-Ratio Factor C_H **741**
- 14-13** Stress Cycle Life Factors Y_N and Z_N **742**
- 14-14** Reliability Factor K_R (Y_Z) **743**
- 14-15** Temperature Factor K_T (Y_θ) **744**
- 14-16** Rim-Thickness Factor K_B **744**
- 14-17** Safety Factors S_F and S_H **745**
- 14-18** Analysis **745**
- 14-19** Design of a Gear Mesh **755**

This chapter is devoted primarily to analysis and design of spur and helical gears to resist bending failure of the teeth as well as pitting failure of tooth surfaces. Failure by bending will occur when the significant tooth stress equals or exceeds either the yield strength or the bending endurance strength. A surface failure occurs when the significant contact stress equals or exceeds the surface endurance strength. The first two sections present a little of the history of the analyses from which current methodology developed.

The American Gear Manufacturers Association¹ (AGMA) has for many years been the responsible authority for the dissemination of knowledge pertaining to the design and analysis of gearing. The methods this organization presents are in general use in the United States when strength and wear are primary considerations. In view of this fact it is important that the AGMA approach to the subject be presented here.

The general AGMA approach requires a great many charts and graphs—too many for a single chapter in this book. We have omitted many of these here by choosing a single pressure angle and by using only full-depth teeth. This simplification reduces the complexity but does not prevent the development of a basic understanding of the approach. Furthermore, the simplification makes possible a better development of the fundamentals and hence should constitute an ideal introduction to the use of the general AGMA method.² Sections 14–1 and 14–2 are elementary and serve as an examination of the foundations of the AGMA method. Table 14–1 is largely AGMA nomenclature.

14–1 The Lewis Bending Equation

Wilfred Lewis introduced an equation for estimating the bending stress in gear teeth in which the tooth form entered into the formulation. The equation, announced in 1892, still remains the basis for most gear design today.

To derive the basic Lewis equation, refer to Fig. 14–1*a*, which shows a cantilever of cross-sectional dimensions F and t , having a length l and a load W^t , uniformly distributed across the face width F . The section modulus I/c is $Ft^2/6$, and therefore the bending stress is

$$\sigma = \frac{M}{I/c} = \frac{6W^t l}{Ft^2} \quad (a)$$

Gear designers denote the components of gear-tooth forces as W_t , W_r , W_a or W^t , W^r , W^a interchangeably. The latter notation leaves room for post-subscripts essential to free-body diagrams. For instance, for gears 2 and 3 in mesh, W_{23}^t is the transmitted force of

¹500 Montgomery Street, Suite 350, Alexandria, VA 22314-1560.

²The standards ANSI/AGMA 2001-D04 (revised AGMA 2001-C95) and ANSI/AGMA 2101-D04 (metric edition of ANSI/AGMA 2001-D04), *Fundamental Rating Factors and Calculation Methods for Involute Spur and Helical Gear Teeth*, are used in this chapter. The use of American National Standards is completely voluntary; their existence does not in any respect preclude people, whether they have approved the standards or not, from manufacturing, marketing, purchasing, or using products, processes, or procedures not conforming to the standards.

The American National Standards Institute does not develop standards and will in no circumstances give an interpretation of any American National Standard. Requests for interpretation of these standards should be addressed to the American Gear Manufacturers Association. [Tables or other self-supporting sections may be quoted or extracted in their entirety. Credit line should read: "Extracted from ANSI/AGMA Standard 2001-D04 or 2101-D04 *Fundamental Rating Factors and Calculation Methods for Involute Spur and Helical Gear Teeth*" with the permission of the publisher, American Gear Manufacturers Association, 500 Montgomery Street, Suite 350, Alexandria, Virginia 22314-1560.] The foregoing is adapted in part from the ANSI foreword to these standards.

Table 14-1

Symbols, Their Names,
and Locations*

Symbol	Name	Where Found
b	Net width of face of narrowest member	Eq. (14-16)
C_e	Mesh alignment correction factor	Eq. (14-35)
C_f	Surface condition factor	Eq. (14-16)
C_H	Hardness-ratio factor	Eq. (14-18)
C_{ma}	Mesh alignment factor	Eq. (14-34)
C_{mc}	Load correction factor	Eq. (14-31)
C_{mf}	Face load-distribution factor	Eq. (14-30)
C_p	Elastic coefficient	Eq. (14-13)
C_{pf}	Pinion proportion factor	Eq. (14-32)
C_{pm}	Pinion proportion modifier	Eq. (14-33)
d	Operating pitch diameter of pinion	Ex. (14-1)
d_p	Pitch diameter, pinion	Eq. (14-22)
d_G	Pitch diameter, gear	Eq. (14-22)
E	Modulus of elasticity	Eq. (14-10)
F	Net face width of narrowest member	Eq. (14-15)
f_p	Pinion surface finish	Fig. 14-13
H	Power	Fig. 14-17
H_B	Brinell hardness	Ex. 14-3
H_{BG}	Brinell hardness of gear	Sec. 14-12
H_{BP}	Brinell hardness of pinion	Sec. 14-12
hp	Horsepower	Ex. 14-1
h_t	Gear-tooth whole depth	Sec. 14-16
I	Geometry factor of pitting resistance	Eq. (14-16)
J	Geometry factor for bending strength	Eq. (14-15)
K	Contact load factor for pitting resistance	Eq. (6-65)
K_B	Rim-thickness factor	Eq. (14-40)
K_f	Fatigue stress-concentration factor	Eq. (14-9)
K_m	Load-distribution factor	Eq. (14-30)
K_o	Overload factor	Eq. (14-15)
K_R	Reliability factor	Eq. (14-17)
K_s	Size factor	Sec. 14-10
K_T	Temperature factor	Eq. (14-17)
K_v	Dynamic factor	Eq. (14-27)
m	Metric module	Eq. (14-15)
m_B	Backup ratio	Eq. (14-39)
m_G	Gear ratio (never less than 1)	Eq. (14-22)
m_N	Load-sharing ratio	Eq. (14-21)
N	Number of stress cycles	Fig. 14-14
N_G	Number of teeth on gear	Eq. (14-22)
N_P	Number of teeth on pinion	Eq. (14-22)
n	Speed	Ex. 14-1

(Continued)

Table 14-1

Symbols, Their Names,
and Locations*
(Continued)

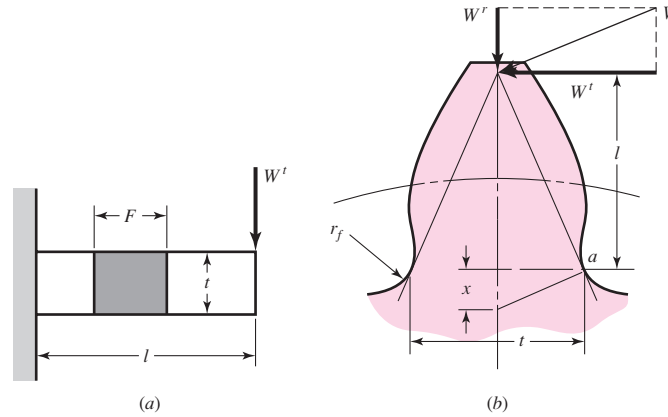
Symbol	Name	Where Found
n_P	Pinion speed	Ex. 14-4
P	Diametral pitch	Eq. (14-2)
P_d	Diametral pitch of pinion	Eq. (14-15)
p_N	Normal base pitch	Eq. (14-24)
p_n	Normal circular pitch	Eq. (14-24)
p_x	Axial pitch	Eq. (14-19)
Q_v	Transmission accuracy level number	Eq. (14-29)
R	Reliability	Eq. (14-38)
R_σ	Root-mean-squared roughness	Fig. 14-13
r_f	Tooth fillet radius	Fig. 14-1
r_G	Pitch-circle radius, gear	In standard
r_P	Pitch-circle radius, pinion	In standard
r_{bP}	Pinion base-circle radius	Eq. (14-25)
r_{bG}	Gear base-circle radius	Eq. (14-25)
S_C	Buckingham surface endurance strength	Ex. 14-3
S_c	AGMA surface endurance strength	Eq. (14-18)
S_t	AGMA bending strength	Eq. (14-17)
S	Bearing span	Fig. 14-10
S_l	Pinion offset from center span	Fig. 14-10
S_F	Safety factor—bending	Eq. (14-41)
S_H	Safety factor—pitting	Eq. (14-42)
W^t or W_t^\dagger	Transmitted load	Fig. 14-1
Y_N	Stress cycle factor for bending strength	Fig. 14-14
Z_N	Stress cycle factor for pitting resistance	Fig. 14-15
β	Exponent	Eq. (14-44)
σ	Bending stress	Eq. (14-2)
σ_C	Contact stress from Hertzian relationships	Eq. (14-14)
σ_c	Contact stress from AGMA relationships	Eq. (14-16)
σ_{all}	Allowable bending stress	Eq. (14-17)
$\sigma_{c,all}$	Allowable contact stress, AGMA	Eq. (14-18)
ϕ	Pressure angle	Eq. (14-12)
ϕ_t	Transverse pressure angle	Eq. (14-23)
ψ	Helix angle at standard pitch diameter	Ex. 14-5

*Because ANSI/AGMA 2001-C95 introduced a significant amount of new nomenclature, and continued in ANSI/AGMA 2001-D04, this summary and references are provided for use until the reader's vocabulary has grown.

†See preference rationale following Eq. (a), Sec. 14-1.

body 2 on body 3, and W_{32}^t is the transmitted force of body 3 on body 2. When working with double- or triple-reduction speed reducers, this notation is compact and essential to clear thinking. Since gear-force components rarely take exponents, this causes no complication. Pythagorean combinations, if necessary, can be treated with parentheses or avoided by expressing the relations trigonometrically.

Figure 14-1



Referring now to Fig. 14-1b, we assume that the maximum stress in a gear tooth occurs at point a . By similar triangles, you can write

$$\frac{t/2}{x} = \frac{l}{t/2} \quad \text{or} \quad x = \frac{t^2}{4l} \quad (b)$$

By rearranging Eq. (a),

$$\sigma = \frac{6W^t l}{F t^2} = \frac{W^t}{F} \frac{1}{t^2/6l} = \frac{W^t}{F} \frac{1}{t^2/4l} \frac{4}{6} \quad (c)$$

If we now substitute the value of x from Eq. (b) in Eq. (c) and multiply the numerator and denominator by the circular pitch p , we find

$$\sigma = \frac{W^t p}{F \left(\frac{2}{3}\right) x p} \quad (d)$$

Letting $y = 2x/3p$, we have

$$\sigma = \frac{W^t}{F p y} \quad (14-1)$$

This completes the development of the original Lewis equation. The factor y is called the *Lewis form factor*, and it may be obtained by a graphical layout of the gear tooth or by digital computation.

In using this equation, most engineers prefer to employ the diametral pitch in determining the stresses. This is done by substituting $P = \pi/p$ and $Y = \pi y$ in Eq. (14-1). This gives

$$\sigma = \frac{W^t P}{F Y} \quad (14-2)$$

where

$$Y = \frac{2xP}{3} \quad (14-3)$$

The use of this equation for Y means that only the bending of the tooth is considered and that the compression due to the radial component of the force is neglected. Values of Y obtained from this equation are tabulated in Table 14-2.

Table 14-2

Values of the Lewis Form Factor Y (These Values Are for a Normal Pressure Angle of 20° , Full-Depth Teeth, and a Diametral Pitch of Unity in the Plane of Rotation)

Number of Teeth	Y	Number of Teeth	Y
12	0.245	28	0.353
13	0.261	30	0.359
14	0.277	34	0.371
15	0.290	38	0.384
16	0.296	43	0.397
17	0.303	50	0.409
18	0.309	60	0.422
19	0.314	75	0.435
20	0.322	100	0.447
21	0.328	150	0.460
22	0.331	300	0.472
24	0.337	400	0.480
26	0.346	Rack	0.485

The use of Eq. (14-3) also implies that the teeth do not share the load and that the greatest force is exerted at the tip of the tooth. But we have already learned that the contact ratio should be somewhat greater than unity, say about 1.5, to achieve a quality gearset. If, in fact, the gears are cut with sufficient accuracy, the tip-load condition is not the worst, because another pair of teeth will be in contact when this condition occurs. Examination of run-in teeth will show that the heaviest loads occur near the middle of the tooth. Therefore the maximum stress probably occurs while a single pair of teeth is carrying the full load, at a point where another pair of teeth is just on the verge of coming into contact.

Dynamic Effects

When a pair of gears is driven at moderate or high speed and noise is generated, it is certain that dynamic effects are present. One of the earliest efforts to account for an increase in the load due to velocity employed a number of gears of the same size, material, and strength. Several of these gears were tested to destruction by meshing and loading them at zero velocity. The remaining gears were tested to destruction at various pitch-line velocities. For example, if a pair of gears failed at 500 lbf tangential load at zero velocity and at 250 lbf at velocity V_1 , then a *velocity factor*, designated K_v , of 2 was specified for the gears at velocity V_1 . Then another, identical, pair of gears running at a pitch-line velocity V_1 could be assumed to have a load equal to twice the tangential or transmitted load.

Note that the definition of dynamic factor K_v has been altered. AGMA standards ANSI/AGMA 2001-D04 and 2101-D04 contain this caution:

Dynamic factor K_v has been redefined as the reciprocal of that used in previous AGMA standards. It is now greater than 1.0. In earlier AGMA standards it was less than 1.0.

Care must be taken in referring to work done prior to this change in the standards.

In the nineteenth century, Carl G. Barth first expressed the velocity factor, and in terms of the current AGMA standards, they are represented as

$$K_v = \frac{600 + V}{600} \quad (\text{cast iron, cast profile}) \quad (14-4a)$$

$$K_v = \frac{1200 + V}{1200} \quad (\text{cut or milled profile}) \quad (14-4b)$$

where V is the pitch-line velocity in feet per minute. It is also quite probable, because of the date that the tests were made, that the tests were conducted on teeth having a cycloidal profile instead of an involute profile. Cycloidal teeth were in general use in the nineteenth century because they were easier to cast than involute teeth. Equation (14-4a) is called the *Barth equation*. The Barth equation is often modified into Eq. (14-4b), for cut or milled teeth. Later AGMA added

$$K_v = \frac{50 + \sqrt{V}}{50} \quad (\text{hobbed or shaped profile}) \quad (14-5a)$$

$$K_v = \sqrt{\frac{78 + \sqrt{V}}{78}} \quad (\text{shaved or ground profile}) \quad (14-5b)$$

In SI units, Eqs. (14-4a) through (14-5b) become

$$K_v = \frac{3.05 + V}{3.05} \quad (\text{cast iron, cast profile}) \quad (14-6a)$$

$$K_v = \frac{6.1 + V}{6.1} \quad (\text{cut or milled profile}) \quad (14-6b)$$

$$K_v = \frac{3.56 + \sqrt{V}}{3.56} \quad (\text{hobbed or shaped profile}) \quad (14-6c)$$

$$K_v = \sqrt{\frac{5.56 + \sqrt{V}}{5.56}} \quad (\text{shaved or ground profile}) \quad (14-6d)$$

where V is in meters per second (m/s).

Introducing the velocity factor into Eq. (14-2) gives

$$\sigma = \frac{K_v W^t P}{F Y} \quad (14-7)$$

The metric version of this equation is

$$\sigma = \frac{K_v W^t}{F m Y} \quad (14-8)$$

where the face width F and the module m are both in millimeters (mm). Expressing the tangential component of load W^t in newtons (N) then results in stress units of megapascals (MPa).

As a general rule, spur gears should have a face width F from 3 to 5 times the circular pitch p .

Equations (14-7) and (14-8) are important because they form the basis for the AGMA approach to the bending strength of gear teeth. They are in general use for

estimating the capacity of gear drives when life and reliability are not important considerations. The equations can be useful in obtaining a preliminary estimate of gear sizes needed for various applications.

EXAMPLE 14-1

A stock spur gear is available having a diametral pitch of 8 teeth/in, a $1\frac{1}{2}$ -in face, 16 teeth, and a pressure angle of 20° with full-depth teeth. The material is AISI 1020 steel in as-rolled condition. Use a design factor of $n_d = 3$ to rate the horsepower output of the gear corresponding to a speed of 1200 rev/m and moderate applications.

Solution

The term *moderate applications* seems to imply that the gear can be rated by using the yield strength as a criterion of failure. From Table A-20, we find $S_{ut} = 55$ kpsi and $S_y = 30$ kpsi. A design factor of 3 means that the allowable bending stress is $30/3 = 10$ kpsi. The pitch diameter is $N/P = 16/8 = 2$ in, so the pitch-line velocity is

$$V = \frac{\pi dn}{12} = \frac{\pi(2)1200}{12} = 628 \text{ ft/min}$$

The velocity factor from Eq. (14-4b) is found to be

$$K_v = \frac{1200 + V}{1200} = \frac{1200 + 628}{1200} = 1.52$$

Table 14-2 gives the form factor as $Y = 0.296$ for 16 teeth. We now arrange and substitute in Eq. (14-7) as follows:

$$W^t = \frac{FY\sigma_{\text{all}}}{K_v P} = \frac{1.5(0.296)10\,000}{1.52(8)} = 365 \text{ lbf}$$

The horsepower that can be transmitted is

$$hp = \frac{W^t V}{33\,000} = \frac{365(628)}{33\,000} = 6.95 \text{ hp}$$

Answer

It is important to emphasize that this is a rough estimate, and that this approach must not be used for important applications. The example is intended to help you understand some of the fundamentals that will be involved in the AGMA approach.

EXAMPLE 14-2

Estimate the horsepower rating of the gear in the previous example based on obtaining an infinite life in bending.

Solution

The rotating-beam endurance limit is estimated from Eq. (6-8)

$$S'_e = 0.5S_{ut} = 0.5(55) = 27.5 \text{ kpsi}$$

To obtain the surface finish Marin factor k_a we refer to Table 6-3 for machined surface, finding $a = 2.70$ and $b = -0.265$. Then Eq. (6-19) gives the surface finish Marin factor k_a as

$$k_a = aS_{ut}^b = 2.70(55)^{-0.265} = 0.934$$

The next step is to estimate the size factor k_b . From Table 13–1, the sum of the addendum and dedendum is

$$l = \frac{1}{P} + \frac{1.25}{P} = \frac{1}{8} + \frac{1.25}{8} = 0.281 \text{ in}$$

The tooth thickness t in Fig. 14–1*b* is given in Sec. 14–1 [Eq. (b)] as $t = (4lx)^{1/2}$ when $x = 3Y/(2P)$ from Eq. (14–3). Therefore, since from Ex. 14–1 $Y = 0.296$ and $P = 8$,

$$x = \frac{3Y}{2P} = \frac{3(0.296)}{2(8)} = 0.0555 \text{ in}$$

then

$$t = (4lx)^{1/2} = [4(0.281)(0.0555)]^{1/2} = 0.250 \text{ in}$$

We have recognized the tooth as a cantilever beam of rectangular cross section, so the equivalent rotating-beam diameter must be obtained from Eq. (6–25):

$$d_e = 0.808(hb)^{1/2} = 0.808(Ft)^{1/2} = 0.808[1.5(0.250)]^{1/2} = 0.495 \text{ in}$$

Then, Eq. (6–20) gives k_b as

$$k_b = \left(\frac{d_e}{0.30}\right)^{-0.107} = \left(\frac{0.495}{0.30}\right)^{-0.107} = 0.948$$

The load factor k_c from Eq. (6–26) is unity. With no information given concerning temperature and reliability we will set $k_d = k_e = 1$.

Two effects are used to evaluate the miscellaneous-effects Marin factor k_f . The first of these is the effect of one-way bending. In general, a gear tooth is subjected only to one-way bending. Exceptions include idler gears and gears used in reversing mechanisms.

For one-way bending the steady and alternating stress components are $\sigma_a = \sigma_m = \sigma/2$ where σ is the largest repeatedly applied bending stress as given in Eq. (14–7). If a material exhibited a Goodman failure locus,

$$\frac{S_a}{S'_e} + \frac{S_m}{S_{ut}} = 1$$

Since S_a and S_m are equal for one-way bending, we substitute S_a for S_m and solve the preceding equation for S_a , giving

$$S_a = \frac{S'_e S_{ut}}{S'_e + S_{ut}}$$

Now replace S_a with $\sigma/2$, and in the denominator replace S'_e with $0.5S_{ut}$ to obtain

$$\sigma = \frac{2S'_e S_{ut}}{0.5S_{ut} + S_{ut}} = \frac{2S'_e}{0.5 + 1} = 1.33S'_e$$

Now $k_f = \sigma/S'_e = 1.33S'_e/S'_e = 1.33$. However, a Gerber fatigue locus gives mean values of

$$\frac{S_a}{S'_e} + \left(\frac{S_m}{S_{ut}}\right)^2 = 1$$

Setting $S_a = S_m$ and solving the quadratic in S_a gives

$$S_a = \frac{S_{ut}^2}{2S_e'} \left(-1 + \sqrt{1 + \frac{4S_e'^2}{S_{ut}^2}} \right)$$

Setting $S_a = \sigma/2$, $S_{ut} = S_e'/0.5$ gives

$$\sigma = \frac{S_e'}{0.5^2} \left[-1 + \sqrt{1 + 4(0.5)^2} \right] = 1.66S_e'$$

and $k_f = \sigma/S_e' = 1.66$. Since a Gerber locus runs in and among fatigue data and Goodman does not, we will use $k_f = 1.66$.

The second effect to be accounted for in using the miscellaneous-effects Marin factor k_f is stress concentration, for which we will use our fundamentals from Chap. 6. For a 20° full-depth tooth the radius of the root fillet is denoted r_f , where

$$r_f = \frac{0.300}{P} = \frac{0.300}{8} = 0.0375 \text{ in}$$

From Fig. A–15–6

$$\frac{r}{d} = \frac{r_f}{t} = \frac{0.0375}{0.250} = 0.15$$

Since $D/d = \infty$, we approximate with $D/d = 3$, giving $K_t = 1.68$. From Fig. 6–20, $q = 0.62$. From Eq. (6–32)

$$K_f = 1 + (0.62)(1.68 - 1) = 1.42$$

The miscellaneous-effects Marin factor for stress concentration can be expressed as

$$k_f = \frac{1}{K_f} = \frac{1}{1.42} = 0.704$$

The final value of k_f is the product of the two k_f factors, that is, $1.66(0.704) = 1.17$. The Marin equation for the fully corrected endurance strength is

$$\begin{aligned} S_e &= k_a k_b k_c k_d k_e k_f S_e' \\ &= 0.934(0.948)(1)(1)(1)1.17(27.5) = 28.5 \text{ kpsi} \end{aligned}$$

For a design factor of $n_d = 3$, as used in Ex. 14–1, applied to the load or strength, the allowable bending stress is

$$\sigma_{\text{all}} = \frac{S_e}{n_d} = \frac{28.5}{3} = 9.5 \text{ kpsi}$$

The transmitted load W^t is

$$W^t = \frac{F Y \sigma_{\text{all}}}{K_v P} = \frac{1.5(0.296)9\,500}{1.52(8)} = 347 \text{ lbf}$$

and the power is, with $V = 628 \text{ ft/min}$ from Ex. 14–1,

$$hp = \frac{W^t V}{33\,000} = \frac{347(628)}{33\,000} = 6.6 \text{ hp}$$

Again, it should be emphasized that these results should be accepted *only* as preliminary estimates to alert you to the nature of bending in gear teeth.

In Ex. 14–2 our resources (Fig. A–15–6) did not directly address stress concentration in gear teeth. A photoelastic investigation by Dolan and Broghamer reported in 1942 constitutes a primary source of information on stress concentration.³ Mitchiner and Mabie⁴ interpret the results in term of fatigue stress-concentration factor K_f as

$$K_f = H + \left(\frac{t}{r}\right)^L \left(\frac{t}{l}\right)^M \quad (14-9)$$

$$\begin{aligned} \text{where } H &= 0.34 - 0.458\,366\,2\phi \\ L &= 0.316 - 0.458\,366\,2\phi \\ M &= 0.290 + 0.458\,366\,2\phi \\ r &= \frac{(b - r_f)^2}{(d/2) + b - r_f} \end{aligned}$$

In these equations l and t are from the layout in Fig. 14–1, ϕ is the pressure angle, r_f is the fillet radius, b is the dedendum, and d is the pitch diameter. It is left as an exercise for the reader to compare K_f from Eq. (14–9) with the results of using the approximation of Fig. A–15–6 in Ex. 14–2.

14-2 Surface Durability

In this section we are interested in the failure of the surfaces of gear teeth, which is generally called *wear*. *Pitting*, as explained in Sec. 6–16, is a surface fatigue failure due to many repetitions of high contact stresses. Other surface failures are *scoring*, which is a lubrication failure, and *abrasion*, which is wear due to the presence of foreign material.

To obtain an expression for the surface-contact stress, we shall employ the Hertz theory. In Eq. (3–74) it was shown that the contact stress between two cylinders may be computed from the equation

$$p_{\max} = \frac{2F}{\pi bl} \quad (a)$$

where p_{\max} = largest surface pressure
 F = force pressing the two cylinders together
 l = length of cylinders

and half-width b is obtained from Eq. (3–73):

$$b = \left\{ \frac{2F \left[\frac{(1 - \nu_1^2)}{E_1} \right] + \left[\frac{(1 - \nu_2^2)}{E_2} \right]}{\pi l \left[\frac{1}{d_1} + \frac{1}{d_2} \right]} \right\}^{1/2} \quad (14-10)$$

where ν_1 , ν_2 , E_1 , and E_2 are the elastic constants and d_1 and d_2 are the diameters, respectively, of the two contacting cylinders.

To adapt these relations to the notation used in gearing, we replace F by $W^t/\cos\phi$, d by $2r$, and l by the face width F . With these changes, we can substitute the value of b

³T. J. Dolan and E. I. Broghamer, *A Photoelastic Study of the Stresses in Gear Tooth Fillets*, Bulletin 335, Univ. Ill. Exp. Sta., March 1942. See also W. D. Pilkey, *Peterson's Stress Concentration Factors*, 2nd ed., John Wiley & Sons, New York, 1997, pp. 383–385, 412–415.

⁴R. G. Mitchiner and H. H. Mabie, "Determination of the Lewis Form Factor and the AGMA Geometry Factor J of External Spur Gear Teeth," *J. Mech. Des.*, Vol. 104, No. 1, Jan. 1982, pp. 148–158.

as given by Eq. (14–10) in Eq. (a). Replacing p_{\max} by σ_C , the *surface compressive stress (Hertzian stress)* is found from the equation

$$\sigma_C^2 = \frac{W^t}{\pi F \cos \phi} \frac{(1/r_1) + (1/r_2)}{[(1 - \nu_1^2)/E_1] + [(1 - \nu_2^2)/E_2]} \quad (14-11)$$

where r_1 and r_2 are the instantaneous values of the radii of curvature on the pinion- and gear-tooth profiles, respectively, at the point of contact. By accounting for load sharing in the value of W^t used, Eq. (14–11) can be solved for the Hertzian stress for any or all points from the beginning to the end of tooth contact. Of course, pure rolling exists only at the pitch point. Elsewhere the motion is a mixture of rolling and sliding. Equation (14–11) does not account for any sliding action in the evaluation of stress. We note that AGMA uses μ for Poisson's ratio instead of ν as is used here.

We have already noted that the first evidence of wear occurs near the pitch line. The radii of curvature of the tooth profiles at the pitch point are

$$r_1 = \frac{d_P \sin \phi}{2} \quad r_2 = \frac{d_G \sin \phi}{2} \quad (14-12)$$

where ϕ is the pressure angle and d_P and d_G are the pitch diameters of the pinion and gear, respectively.

Note, in Eq. (14–11), that the denominator of the second group of terms contains four elastic constants, two for the pinion and two for the gear. As a simple means of combining and tabulating the results for various combinations of pinion and gear materials, AGMA defines an *elastic coefficient* C_p by the equation

$$C_p = \left[\frac{1}{\pi \left(\frac{1 - \nu_P^2}{E_P} + \frac{1 - \nu_G^2}{E_G} \right)} \right]^{1/2} \quad (14-13)$$

With this simplification, and the addition of a velocity factor K_v , Eq. (14–11) can be written as

$$\sigma_C = -C_p \left[\frac{K_v W^t}{F \cos \phi} \left(\frac{1}{r_1} + \frac{1}{r_2} \right) \right]^{1/2} \quad (14-14)$$

where the sign is negative because σ_C is a compressive stress.

EXAMPLE 14-3

The pinion of Examples 14–1 and 14–2 is to be mated with a 50-tooth gear manufactured of ASTM No. 50 cast iron. Using the tangential load of 382 lbf, estimate the factor of safety of the drive based on the possibility of a surface fatigue failure.

Solution

From Table A–5 we find the elastic constants to be $E_P = 30$ Mpsi, $\nu_P = 0.292$, $E_G = 14.5$ Mpsi, $\nu_G = 0.211$. We substitute these in Eq. (14–13) to get the elastic coefficient as

$$C_p = \left\{ \frac{1}{\pi \left[\frac{1 - (0.292)^2}{30(10^6)} + \frac{1 - (0.211)^2}{14.5(10^6)} \right]} \right\}^{1/2} = 1817$$

From Example 14–1, the pinion pitch diameter is $d_P = 2$ in. The value for the gear is $d_G = 50/8 = 6.25$ in. Then Eq. (14–12) is used to obtain the radii of curvature at the pitch points. Thus

$$r_1 = \frac{2 \sin 20^\circ}{2} = 0.342 \text{ in} \quad r_2 = \frac{6.25 \sin 20^\circ}{2} = 1.069 \text{ in}$$

The face width is given as $F = 1.5$ in. Use $K_v = 1.52$ from Example 14–1. Substituting all these values in Eq. (14–14) with $\phi = 20^\circ$ gives the contact stress as

$$\sigma_C = -1817 \left[\frac{1.52(380)}{1.5 \cos 20^\circ} \left(\frac{1}{0.342} + \frac{1}{1.069} \right) \right]^{1/2} = -72\,400 \text{ psi}$$

The surface endurance strength of cast iron can be estimated from

$$S_C = 0.32H_B \text{ kpsi}$$

for 10^8 cycles, where S_C is in kpsi. Table A–24 gives $H_B = 262$ for ASTM No. 50 cast iron. Therefore $S_C = 0.32(262) = 83.8$ kpsi. Contact stress is not linear with transmitted load [see Eq. (14–14)]. If the factor of safety is defined as the loss-of-function load divided by the imposed load, then the ratio of loads is the ratio of stresses squared. In other words,

$$n = \frac{\text{loss-of-function load}}{\text{imposed load}} = \frac{S_C^2}{\sigma_C^2} = \left(\frac{83.8}{72.4} \right)^2 = 1.34$$

One is free to define factor of safety as S_C/σ_C . Awkwardness comes when one compares the factor of safety in bending fatigue with the factor of safety in surface fatigue for a particular gear. Suppose the factor of safety of this gear in bending fatigue is 1.20 and the factor of safety in surface fatigue is 1.34 as above. The threat, since 1.34 is greater than 1.20, is in bending fatigue since both numbers are based on load ratios. If the factor of safety in surface fatigue is based on $S_C/\sigma_C = \sqrt{1.34} = 1.16$, then 1.20 is greater than 1.16, but the threat is not from surface fatigue. The surface fatigue factor of safety can be defined either way. One way has the burden of requiring a squared number before numbers that instinctively seem comparable can be compared.

In addition to the dynamic factor K_v already introduced, there are transmitted load excursions, nonuniform distribution of the transmitted load over the tooth contact, and the influence of rim thickness on bending stress. Tabulated strength values can be means, ASTM minimums, or of unknown heritage. In surface fatigue there are no endurance limits. Endurance strengths have to be qualified as to corresponding cycle count, and the slope of the S - N curve needs to be known. In bending fatigue there is a definite change in slope of the S - N curve near 10^6 cycles, but some evidence indicates that an endurance limit does not exist. Gearing experience leads to cycle counts of 10^{11} or more. Evidence of diminishing endurance strengths in bending have been included in AGMA methodology.

14–3 AGMA Stress Equations

Two fundamental stress equations are used in the AGMA methodology, one for bending stress and another for pitting resistance (contact stress). In AGMA terminology, these are called *stress numbers*, as contrasted with actual applied stresses, and are

designated by a lowercase letter s instead of the Greek lower case σ we have used in this book (and shall continue to use). The fundamental equations are

$$\sigma = \begin{cases} W^t K_o K_v K_s \frac{P_d}{F} \frac{K_m K_B}{J} & \text{(U.S. customary units)} \\ W^t K_o K_v K_s \frac{1}{b m_t} \frac{K_H K_B}{Y_J} & \text{(SI units)} \end{cases} \quad (14-15)$$

where for U.S. customary units (SI units),

W^t is the tangential transmitted load, lbf (N)

K_o is the overload factor

K_v is the dynamic factor

K_s is the size factor

P_d is the transverse diametral pitch

F (b) is the face width of the narrower member, in (mm)

K_m (K_H) is the load-distribution factor

K_B is the rim-thickness factor

J (Y_J) is the geometry factor for bending strength (which includes root fillet stress-concentration factor K_f)

(m_t) is the transverse metric module

Before you try to digest the meaning of all these terms in Eq. (14–15), view them as advice concerning items the designer should consider *whether he or she follows the voluntary standard or not*. These items include issues such as

- Transmitted load magnitude
- Overload
- Dynamic augmentation of transmitted load
- Size
- Geometry: pitch and face width
- Distribution of load across the teeth
- Rim support of the tooth
- Lewis form factor and root fillet stress concentration

The fundamental equation for pitting resistance (contact stress) is

$$\sigma_c = \begin{cases} C_p \sqrt{W^t K_o K_v K_s \frac{K_m}{d_p F} \frac{C_f}{I}} & \text{(U.S. customary units)} \\ Z_E \sqrt{W^t K_o K_v K_s \frac{K_H}{d_{w1} b} \frac{Z_R}{Z_I}} & \text{(SI units)} \end{cases} \quad (14-16)$$

where W^t , K_o , K_v , K_s , K_m , F , and b are the same terms as defined for Eq. (14–15). For U.S. customary units (SI units), the additional terms are

C_p (Z_E) is an elastic coefficient, $\sqrt{\text{lbf/in}^2}$ ($\sqrt{\text{N/mm}^2}$)

C_f (Z_R) is the surface condition factor

d_p (d_{w1}) is the pitch diameter of the *pinion*, in (mm)

I (Z_I) is the geometry factor for pitting resistance

The evaluation of all these factors is explained in the sections that follow. The development of Eq. (14–16) is clarified in the second part of Sec. 14–5.

14-4 AGMA Strength Equations

Instead of using the term *strength*, AGMA uses data termed *allowable stress numbers* and designates these by the symbols s_{at} and s_{ac} . It will be less confusing here if we continue the practice in this book of using the uppercase letter S to designate strength and the lowercase Greek letters σ and τ for stress. To make it perfectly clear we shall use the term *gear strength* as a replacement for the phrase *allowable stress numbers* as used by AGMA.

Following this convention, values for *gear bending strength*, designated here as S_t , are to be found in Figs. 14-2, 14-3, and 14-4, and in Tables 14-3 and 14-4. Since gear strengths are not identified with other strengths such as S_{ut} , S_e , or S_y as used elsewhere in this book, their use should be restricted to gear problems.

In this approach the strengths are modified by various factors that produce limiting values of the bending stress and the contact stress.

Figure 14-2

Allowable bending stress number for through-hardened steels. The SI equations are $S_t = 0.533H_B + 88.3$ MPa, grade 1, and $S_t = 0.703H_B + 113$ MPa, grade 2. (Source: ANSI/AGMA 2001-D04 and 2101-D04.)

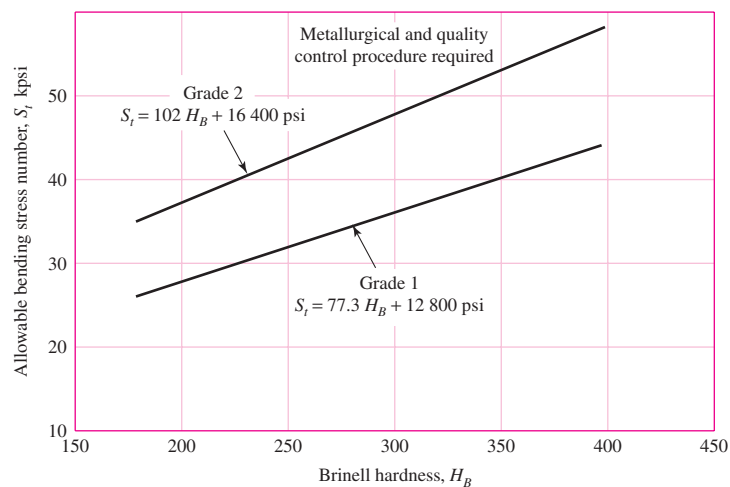


Figure 14-3

Allowable bending stress number for nitrided through-hardened steel gears (i.e., AISI 4140, 4340), S_t . The SI equations are $S_t = 0.568H_B + 83.8$ MPa, grade 1, and $S_t = 0.749H_B + 110$ MPa, grade 2. (Source: ANSI/AGMA 2001-D04 and 2101-D04.)

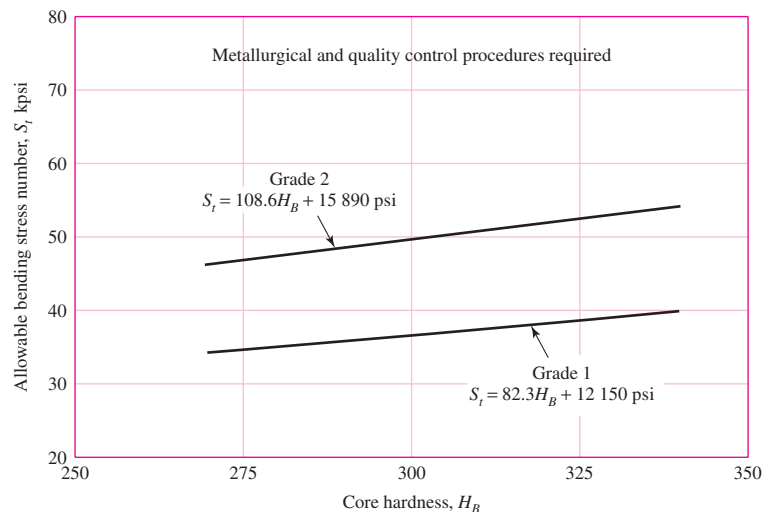
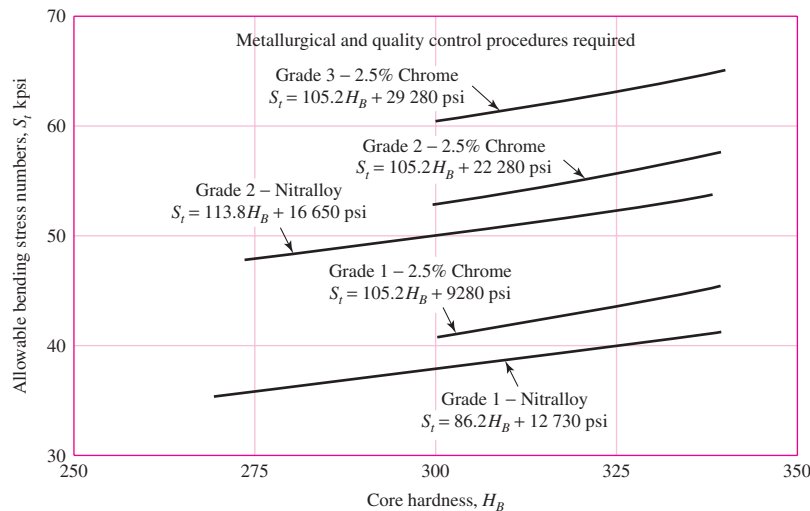


Figure 14-4

Allowable bending stress numbers for nitriding steel gears S_t . The SI equations are $S_t = 0.594H_B + 87.76$ MPa Nitralloy grade 1
 $S_t = 0.784H_B + 114.81$ MPa Nitralloy grade 2
 $S_t = 0.7255H_B + 63.89$ MPa 2.5% chrome, grade 1
 $S_t = 0.7255H_B + 153.63$ MPa 2.5% chrome, grade 2
 $S_t = 0.7255H_B + 201.91$ MPa 2.5% chrome, grade 3
 (Source: ANSI/AGMA 2001-D04, 2101-D04.)

**Table 14-3**

Repeatedly Applied Bending Strength S_t at 10^7 Cycles and 0.99 Reliability for Steel Gears

Source: ANSI/AGMA 2001-D04.

Material Designation	Heat Treatment	Minimum Surface Hardness ¹	Allowable Bending Stress Number S_t , ² psi		
			Grade 1	Grade 2	Grade 3
Steel ³	Through-hardened	See Fig. 14-2	See Fig. 14-2	See Fig. 14-2	—
	Flame ⁴ or induction hardened ⁴ with type A pattern ⁵	See Table 8*	45 000	55 000	—
	Flame ⁴ or induction hardened ⁴ with type B pattern ⁵	See Table 8*	22 000	22 000	—
	Carburized and hardened	See Table 9*	55 000	65 000 or 70 000 ⁶	75 000
	Nitrided ^{4,7} (through-hardened steels)	83.5 HR15N	See Fig. 14-3	See Fig. 14-3	—
Nitralloy 135M, Nitralloy N, and 2.5% chrome (no aluminum)	Nitrided ^{4,7}	87.5 HR15N	See Fig. 14-4	See Fig. 14-4	See Fig. 14-4

Notes: See ANSI/AGMA 2001-D04 for references cited in notes 1–7.

¹Hardness to be equivalent to that at the root diameter in the center of the tooth space and face width.

²See tables 7 through 10 for major metallurgical factors for each stress grade of steel gears.

³The steel selected must be compatible with the heat treatment process selected and hardness required.

⁴The allowable stress numbers indicated may be used with the case depths prescribed in 16.1.

⁵See figure 12 for type A and type B hardness patterns.

⁶If bainite and microcracks are limited to grade 3 levels, 70,000 psi may be used.

⁷The overload capacity of nitrided gears is low. Since the shape of the effective S-N curve is flat, the sensitivity to shock should be investigated before proceeding with the design. [7]

*Tables 8 and 9 of ANSI/AGMA 2001-D04 are comprehensive tabulations of the major metallurgical factors affecting S_t and S_c of flame-hardened and induction-hardened (Table 8) and carburized and hardened (Table 9) steel gears.

Table 14-4

Repeatedly Applied Bending Strength S_t for Iron and Bronze Gears at 10^7 Cycles and 0.99 Reliability
Source: ANSI/AGMA 2001-D04.

Material	Material Designation ¹	Heat Treatment	Typical Minimum Surface Hardness ²	Allowable Bending Stress Number, S_t , ³ psi
ASTM A48 gray cast iron	Class 20	As cast	—	5000
	Class 30	As cast	174 HB	8500
	Class 40	As cast	201 HB	13 000
ASTM A536 ductile (nodular) Iron	Grade 60–40–18	Annealed	140 HB	22 000–33 000
	Grade 80–55–06	Quenched and tempered	179 HB	22 000–33 000
	Grade 100–70–03	Quenched and tempered	229 HB	27 000–40 000
	Grade 120–90–02	Quenched and tempered	269 HB	31 000–44 000
Bronze		Sand cast	Minimum tensile strength 40 000 psi	5700
	ASTM B-148 Alloy 954	Heat treated	Minimum tensile strength 90 000 psi	23 600

Notes:

¹See ANSI/AGMA 2004-B89, *Gear Materials and Heat Treatment Manual*.

²Measured hardness to be equivalent to that which would be measured at the root diameter in the center of the tooth space and face width.

³The lower values should be used for general design purposes. The upper values may be used when:
High quality material is used.
Section size and design allow maximum response to heat treatment.
Proper quality control is effected by adequate inspection.
Operating experience justifies their use.

The equation for the allowable bending stress is

$$\sigma_{\text{all}} = \begin{cases} \frac{S_t}{S_F} \frac{Y_N}{K_T K_R} & \text{(U.S. customary units)} \\ \frac{S_t}{S_F} \frac{Y_N}{Y_\theta Y_Z} & \text{(SI units)} \end{cases} \quad (14-17)$$

where for U.S. customary units (SI units),

- S_t is the allowable bending stress, lbf/in² (N/mm²)
- Y_N is the stress cycle factor for bending stress
- K_T (Y_θ) are the temperature factors
- K_R (Y_Z) are the reliability factors
- S_F is the AGMA factor of safety, a stress ratio

The equation for the allowable contact stress $\sigma_{c,all}$ is

$$\sigma_{c,all} = \begin{cases} \frac{S_c}{S_H} \frac{Z_N C_H}{K_T K_R} & \text{(U.S. customary units)} \\ \frac{S_c}{S_H} \frac{Z_N Z_W}{Y_\theta Y_Z} & \text{(SI units)} \end{cases} \quad (14-18)$$

where the upper equation is in U.S. customary units and the lower equation is in SI units, Also,

S_c is the allowable contact stress, lbf/in² (N/mm²)

Z_N is the stress cycle life factor

C_H (Z_W) are the hardness ratio factors for pitting resistance

K_T (Y_θ) are the temperature factors

K_R (Y_Z) are the reliability factors

S_H is the AGMA factor of safety, a stress ratio

The values for the allowable contact stress, designated here as S_c , are to be found in Fig. 14-5 and Tables 14-5, 14-6, and 14-7.

AGMA allowable stress numbers (strengths) for bending and contact stress are for

- Unidirectional loading
- 10 million stress cycles
- 99 percent reliability

Figure 14-5

Contact-fatigue strength S_c at 10^7 cycles and 0.99 reliability for through-hardened steel gears. The SI equations are $S_c = 2.22H_B + 200$ MPa, grade 1, and $S_c = 2.41H_B + 237$ MPa, grade 2. (Source: ANSI/AGMA 2001-D04 and 2101-D04.)

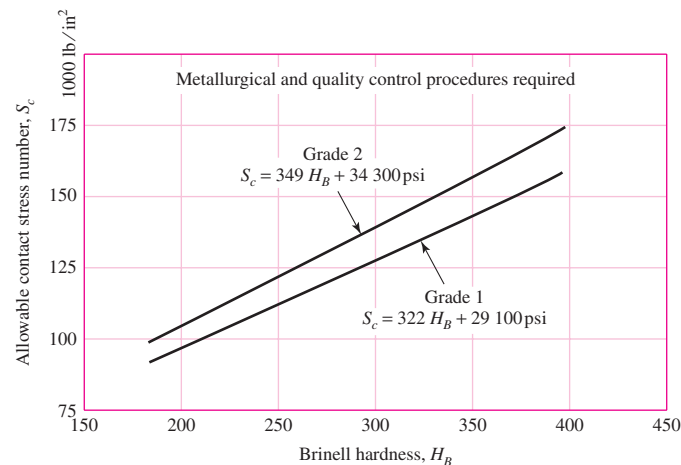


Table 14-5

Nominal Temperature
Used in Nitriding and
Hardnesses Obtained

Source: Darle W. Dudley,
*Handbook of Practical
Gear Design*, rev. ed.,
McGraw-Hill,
New York, 1984.

Steel	Temperature before nitriding, °F	Nitriding, °F	Hardness, Rockwell C Scale	
			Case	Core
Nitralloy 135*	1150	975	62–65	30–35
Nitralloy 135M	1150	975	62–65	32–36
Nitralloy N	1000	975	62–65	40–44
AISI 4340	1100	975	48–53	27–35
AISI 4140	1100	975	49–54	27–35
31 Cr Mo V 9	1100	975	58–62	27–33

*Nitralloy is a trademark of the Nitralloy Corp., New York.

Table 14-6

Repeatedly Applied Contact Strength S_c at 10^7 Cycles and 0.99 Reliability for Steel Gears

Source: ANSI/AGMA 2001-D04.

Material Designation	Heat Treatment	Minimum Surface Hardness ¹	Allowable Contact Stress Number, ² S_c , psi		
			Grade 1	Grade 2	Grade 3
Steel ³	Through hardened ⁴	See Fig. 14-5	See Fig. 14-5	See Fig. 14-5	—
	Flame ⁵ or induction hardened ⁵	50 HRC	170 000	190 000	—
		54 HRC	175 000	195 000	—
	Carburized and hardened ⁵	See Table 9*	180 000	225 000	275 000
	Nitrided ⁵ (through hardened steels)	83.5 HR15N	150 000	163 000	175 000
84.5 HR15N		155 000	168 000	180 000	
2.5% chrome (no aluminum)	Nitrided ⁵	87.5 HR15N	155 000	172 000	189 000
Nitralloy 135M	Nitrided ⁵	90.0 HR15N	170 000	183 000	195 000
Nitralloy N	Nitrided ⁵	90.0 HR15N	172 000	188 000	205 000
2.5% chrome (no aluminum)	Nitrided ⁵	90.0 HR15N	176 000	196 000	216 000

Notes: See ANSI/AGMA 2001-D04 for references cited in notes 1–5.

¹Hardness to be equivalent to that at the start of active profile in the center of the face width.

²See Tables 7 through 10 for major metallurgical factors for each stress grade of steel gears.

³The steel selected must be compatible with the heat treatment process selected and hardness required.

⁴These materials must be annealed or normalized as a minimum.

⁵The allowable stress numbers indicated may be used with the case depths prescribed in 16.1.

*Table 9 of ANSI/AGMA 2001-D04 is a comprehensive tabulation of the major metallurgical factors affecting S_t and S_c of carburized and hardened steel gears.

The factors in this section, too, will be evaluated in subsequent sections.

When two-way (reversed) loading occurs, as with idler gears, AGMA recommends using 70 percent of S_t values. This is equivalent to $1/0.70 = 1.43$ as a value of k_e in Ex. 14-2. The recommendation falls between the value of $k_e = 1.33$ for a Goodman failure locus and $k_e = 1.66$ for a Gerber failure locus.

14-5 Geometry Factors I and J (Z_I and Y_J)

We have seen how the factor Y is used in the Lewis equation to introduce the effect of tooth form into the stress equation. The AGMA factors⁵ I and J are intended to accomplish the same purpose in a more involved manner.

The determination of I and J depends upon the *face-contact ratio* m_F . This is defined as

$$m_F = \frac{F}{p_x} \quad (14-19)$$

where p_x is the axial pitch and F is the face width. For spur gears, $m_F = 0$.

⁵A useful reference is AGMA 908-B89, *Geometry Factors for Determining Pitting Resistance and Bending Strength of Spur, Helical and Herringbone Gear Teeth*.

Table 14-7Repeatedly Applied Contact Strength S_c 10^7 Cycles and 0.99 Reliability for Iron and Bronze Gears

Source: ANSI/AGMA 2001-D04.

Material	Material Designation ¹	Heat Treatment	Typical Minimum Surface Hardness ²	Allowable Contact Stress Number, ³ S_c , psi
ASTM A48 gray cast iron	Class 20	As cast	—	50 000–60 000
	Class 30	As cast	174 HB	65 000–75 000
	Class 40	As cast	201 HB	75 000–85 000
ASTM A536 ductile (nodular) iron	Grade 60–40–18	Annealed	140 HB	77 000–92 000
		Quenched and tempered	179 HB	77 000–92 000
	Grade 100–70–03	Quenched and tempered	229 HB	92 000–112 000
	Grade 120–90–02	Quenched and tempered	269 HB	103 000–126 000
Bronze	—	Sand cast	Minimum tensile strength 40 000 psi	30 000
	ASTM B-148 Alloy 954	Heat treated	Minimum tensile strength 90 000 psi	65 000

Notes:¹See ANSI/AGMA 2004-B89, *Gear Materials and Heat Treatment Manual*.²Hardness to be equivalent to that at the start of active profile in the center of the face width.³The lower values should be used for general design purposes. The upper values may be used when:

High-quality material is used.

Section size and design allow maximum response to heat treatment.

Proper quality control is effected by adequate inspection.

Operating experience justifies their use.

Low-contact-ratio (LCR) helical gears having a small helix angle or a thin face width, or both, have face-contact ratios less than unity ($m_F \leq 1$), and will not be considered here. Such gears have a noise level not too different from that for spur gears. Consequently we shall consider here only spur gears with $m_F = 0$ and conventional helical gears with $m_F > 1$.

Bending-Strength Geometry Factor J (Y_J)

The AGMA factor J employs a modified value of the Lewis form factor, also denoted by Y ; a *fatigue stress-concentration factor* K_f ; and a *tooth load-sharing ratio* m_N . The resulting equation for J for spur and helical gears is

$$J = \frac{Y}{K_f m_N} \quad (14-20)$$

It is important to note that the form factor Y in Eq. (14-20) is *not* the Lewis factor at all. The value of Y here is obtained from calculations within AGMA 908-B89, and is often based on the highest point of single-tooth contact.

The factor K_f in Eq. (14–20) is called a *stress correction factor* by AGMA. It is based on a formula deduced from a photoelastic investigation of stress concentration in gear teeth over 50 years ago.

The load-sharing ratio m_N is equal to the face width divided by the minimum total length of the lines of contact. This factor depends on the transverse contact ratio m_p , the face-contact ratio m_F , the effects of any profile modifications, and the tooth deflection. For spur gears, $m_N = 1.0$. For helical gears having a face-contact ratio $m_F > 2.0$, a conservative approximation is given by the equation

$$m_N = \frac{p_N}{0.95Z} \quad (14-21)$$

where p_N is the normal base pitch and Z is the length of the line of action in the transverse plane (distance L_{ab} in Fig. 13–15).

Use Fig. 14–6 to obtain the geometry factor J for spur gears having a 20° pressure angle and full-depth teeth. Use Figs. 14–7 and 14–8 for helical gears having a 20° normal pressure angle and face-contact ratios of $m_F = 2$ or greater. For other gears, consult the AGMA standard.

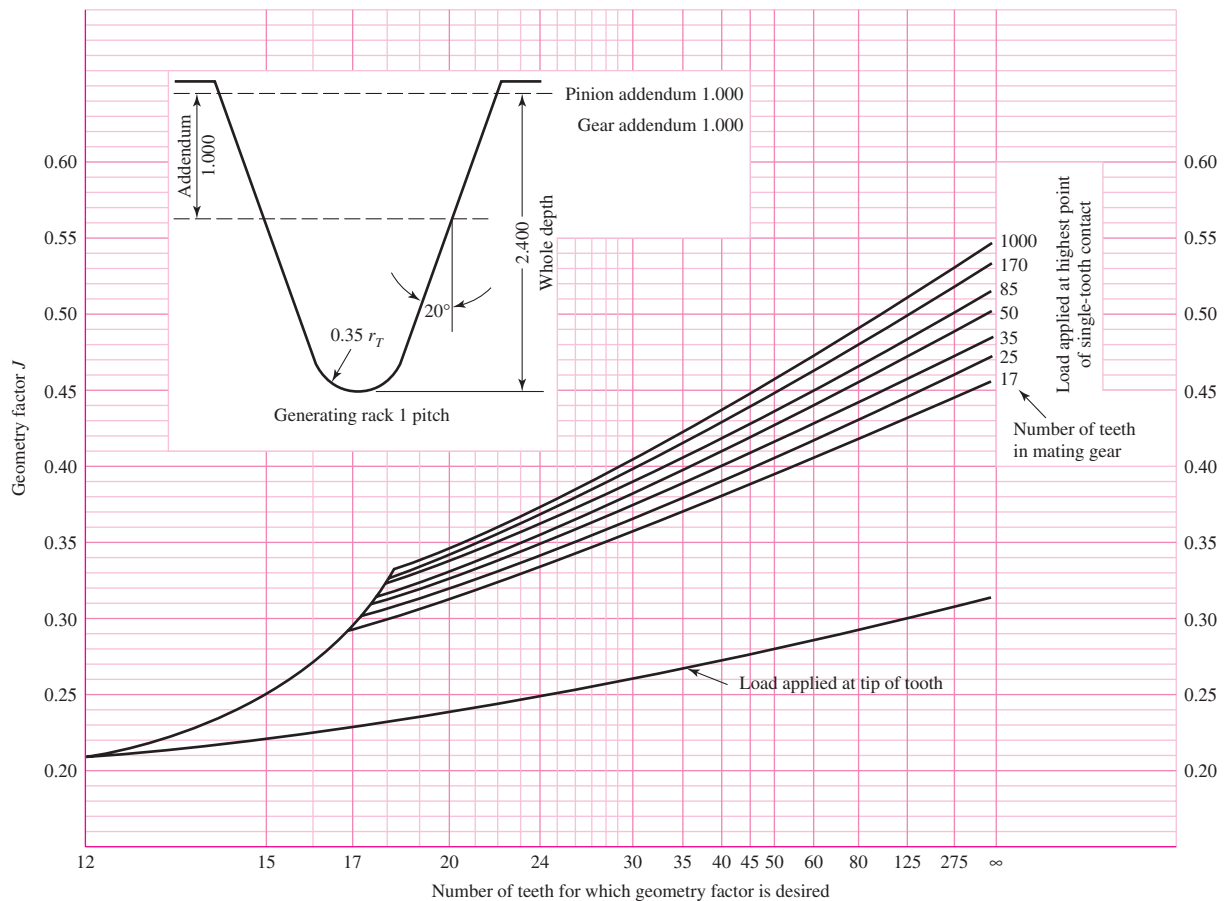
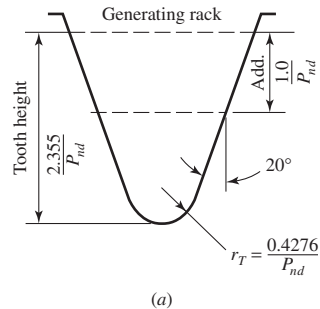


Figure 14–6

Spurgear geometry factors J . Source: The graph is from AGMA 218.01, which is consistent with tabular data from the current AGMA 908-B89. The graph is convenient for design purposes.

734 Mechanical Engineering Design



$$m_N = \frac{P_N}{0.95Z}$$

Value for Z is for an element of indicated numbers of teeth and a 75-tooth mate

Normal tooth thickness of pinion and gear tooth each reduced 0.024 in to provide 0.048 in total backlash for one normal diametral pitch

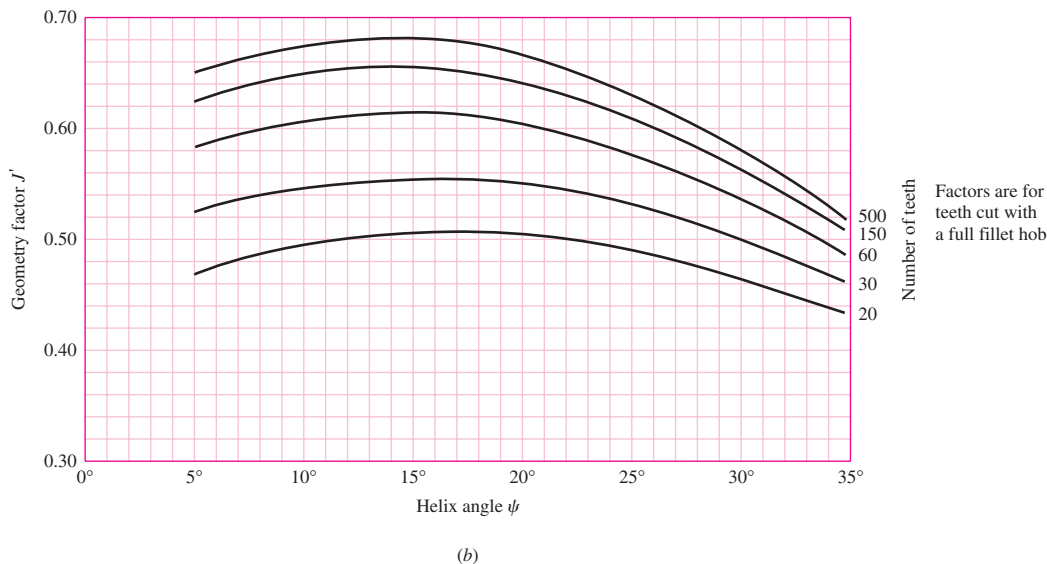


Figure 14-7

Helical-gear geometry factors J' . Source: The graph is from AGMA 218.01, which is consistent with tabular data from the current AGMA 908-B89. The graph is convenient for design purposes.

Surface-Strength Geometry Factor $I (Z_I)$

The factor I is also called the *pitting-resistance geometry factor* by AGMA. We will develop an expression for I by noting that the sum of the reciprocals of Eq. (14-14), from Eq. (14-12), can be expressed as

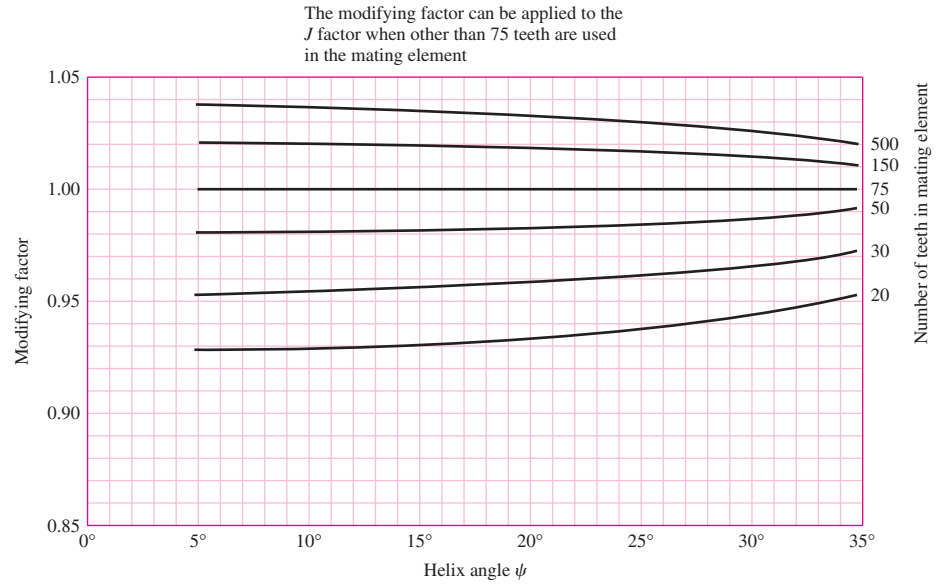
$$\frac{1}{r_1} + \frac{1}{r_2} = \frac{2}{\sin \phi_t} \left(\frac{1}{d_P} + \frac{1}{d_G} \right) \quad (a)$$

where we have replaced ϕ by ϕ_t , the transverse pressure angle, so that the relation will apply to helical gears too. Now define *speed ratio* m_G as

$$m_G = \frac{N_G}{N_P} = \frac{d_G}{d_P} \quad (14-22)$$

Figure 14-8

J' -factor multipliers for use with Fig. 14-7 to find J .
Source: The graph is from AGMA 218.01, which is consistent with tabular data from the current AGMA 908-B89. The graph is convenient for design purposes.



Equation (a) can now be written

$$\frac{1}{r_1} + \frac{1}{r_2} = \frac{2}{d_P \sin \phi_t} \frac{m_G + 1}{m_G} \quad (b)$$

Now substitute Eq. (b) for the sum of the reciprocals in Eq. (14-14). The result is found to be

$$\sigma_c = -\sigma_c = C_p \left[\frac{K_V W^t}{d_P F} \frac{1}{\frac{\cos \phi_t \sin \phi_t}{2} \frac{m_G}{m_G + 1}} \right]^{1/2} \quad (c)$$

The geometry factor I for external spur and helical gears is the denominator of the second term in the brackets in Eq. (c). By adding the load-sharing ratio m_N , we obtain a factor valid for both spur and helical gears. The equation is then written as

$$I = \begin{cases} \frac{\cos \phi_t \sin \phi_t}{2m_N} \frac{m_G}{m_G + 1} & \text{external gears} \\ \frac{\cos \phi_t \sin \phi_t}{2m_N} \frac{m_G}{m_G - 1} & \text{internal gears} \end{cases} \quad (14-23)$$

where $m_N = 1$ for spur gears. In solving Eq. (14-21) for m_N , note that

$$p_N = p_n \cos \phi_n \quad (14-24)$$

where p_n is the normal circular pitch. The quantity Z , for use in Eq. (14-21), can be obtained from the equation

$$Z = [(r_P + a)^2 - r_{bP}^2]^{1/2} + [(r_G + a)^2 - r_{bG}^2]^{1/2} - (r_P + r_G) \sin \phi_t \quad (14-25)$$

where r_P and r_G are the pitch radii and r_{bP} and r_{bG} the base-circle radii of the pinion and gear, respectively.⁶ Recall from Eq. (13-6), the radius of the base circle is

$$r_b = r \cos \phi_t \quad (14-26)$$

⁶For a development, see Joseph E. Shigley and John J. Uicker Jr., *Theory of Machines and Mechanisms*, McGraw-Hill, New York, 1980, p. 262.

Certain precautions must be taken in using Eq. (14–25). The tooth profiles are not conjugate below the base circle, and consequently, if either one or the other of the first two terms in brackets is larger than the third term, then it should be replaced by the third term. In addition, the effective outside radius is sometimes less than $r + a$, owing to removal of burrs or rounding of the tips of the teeth. When this is the case, always use the effective outside radius instead of $r + a$.

14–6 The Elastic Coefficient C_p (Z_E)

Values of C_p may be computed directly from Eq. (14–13) or obtained from Table 14–8.

14–7 Dynamic Factor K_v

As noted earlier, dynamic factors are used to account for inaccuracies in the manufacture and meshing of gear teeth in action. *Transmission error* is defined as the departure from uniform angular velocity of the gear pair. Some of the effects that produce transmission error are:

- Inaccuracies produced in the generation of the tooth profile; these include errors in tooth spacing, profile lead, and runout
- Vibration of the tooth during meshing due to the tooth stiffness
- Magnitude of the pitch-line velocity
- Dynamic unbalance of the rotating members
- Wear and permanent deformation of contacting portions of the teeth
- Gearshaft misalignment and the linear and angular deflection of the shaft
- Tooth friction

In an attempt to account for these effects, AGMA has defined a set of *quality numbers*.⁷ These numbers define the tolerances for gears of various sizes manufactured to a specified accuracy. Quality numbers 3 to 7 will include most commercial-quality gears. Quality numbers 8 to 12 are of precision quality. The AGMA *transmission accuracy-level number* Q_v could be taken as the same as the quality number. The following equations for the dynamic factor are based on these Q_v numbers:

$$K_v = \begin{cases} \left(\frac{A + \sqrt{V}}{A} \right)^B & V \text{ in ft/min} \\ \left(\frac{A + \sqrt{200V}}{A} \right)^B & V \text{ in m/s} \end{cases} \quad (14-27)$$

where

$$A = 50 + 56(1 - B) \quad (14-28)$$

$$B = 0.25(12 - Q_v)^{2/3}$$

and the maximum velocity, representing the end point of the Q_v curve, is given by

$$(V_t)_{\max} = \begin{cases} [A + (Q_v - 3)]^2 & \text{ft/min} \\ \frac{[A + (Q_v - 3)]^2}{200} & \text{m/s} \end{cases} \quad (14-29)$$

⁷AGMA 2000-A88. ANSI/AGMA 2001-D04, adopted in 2004, replaced Q_v with A_v and incorporated ANSI/AGMA 2015-1-A01. A_v ranges from 6 to 12, with lower numbers representing greater accuracy. The Q_v approach was maintained as an alternate approach, and resulting K_v values are comparable.

Table 14–8

Elastic Coefficient C_p (Z_E), $\sqrt{\text{psi}}$ ($\sqrt{\text{MPa}}$) Source: AGMA 218.01

Pinion Material	Pinion Modulus of Elasticity E_p (MPa)*	Gear Material and Modulus of Elasticity E_g , lbf/in ² (MPa)*					
		Steel 30×10^6 (2×10^5)	Malleable Iron 25×10^6 (1.7×10^5)	Nodular Iron 24×10^6 (1.7×10^5)	Cast Iron 22×10^6 (1.5×10^5)	Aluminum Bronze 17.5×10^6 (1.2×10^5)	Tin Bronze 16×10^6 (1.1×10^5)
Steel	30×10^6 (2×10^5)	2300 (191)	2180 (181)	2160 (179)	2100 (174)	1950 (162)	1900 (158)
Malleable iron	25×10^6 (1.7×10^5)	2180 (181)	2090 (174)	2070 (172)	2020 (168)	1900 (158)	1850 (154)
Nodular iron	24×10^6 (1.7×10^5)	2160 (179)	2070 (172)	2050 (170)	2000 (166)	1880 (156)	1830 (152)
Cast iron	22×10^6 (1.5×10^5)	2100 (174)	2020 (168)	2000 (166)	1960 (163)	1850 (154)	1800 (149)
Aluminum bronze	17.5×10^6 (1.2×10^5)	1950 (162)	1900 (158)	1880 (156)	1850 (154)	1750 (145)	1700 (141)
Tin bronze	16×10^6 (1.1×10^5)	1900 (158)	1850 (154)	1830 (152)	1800 (149)	1700 (141)	1650 (137)

Poisson's ratio = 0.30.

*When more exact values for modulus of elasticity are obtained from roller contact tests, they may be used.

Figure 14-9

Dynamic factor K_v . The equations to these curves are given by Eq. (14-27) and the end points by Eq. (14-29). (ANSI/AGMA 2001-D04, Annex A)

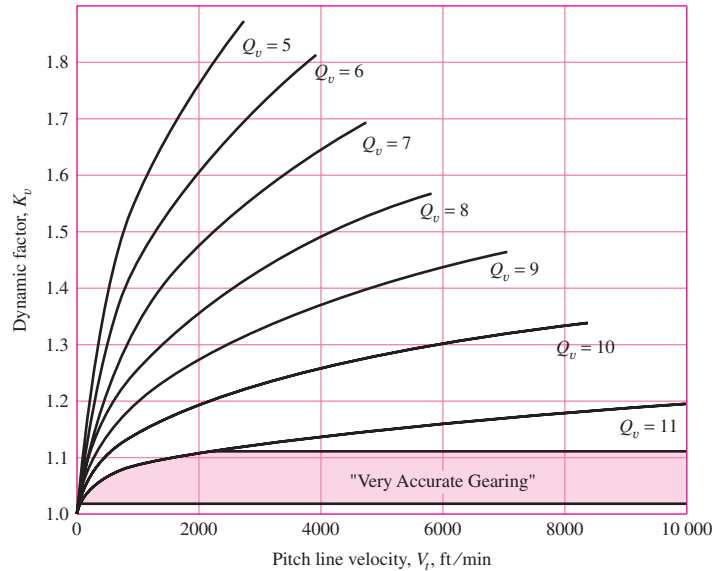


Figure 14-9 is a graph of K_v , the dynamic factor, as a function of pitch-line speed for graphical estimates of K_v .

14-8 Overload Factor K_o

The overload factor K_o is intended to make allowance for all externally applied loads in excess of the nominal tangential load W^t in a particular application (see Figs. 14-17 and 14-18). Examples include variations in torque from the mean value due to firing of cylinders in an internal combustion engine or reaction to torque variations in a piston pump drive. There are other similar factors such as application factor or service factor. These factors are established after considerable field experience in a particular application.⁸

14-9 Surface Condition Factor C_f (Z_R)

The surface condition factor C_f or Z_R is used only in the pitting resistance equation, Eq. (14-16). It depends on

- Surface finish as affected by, but not limited to, cutting, shaving, lapping, grinding, shotpeening
- Residual stress
- Plastic effects (work hardening)

Standard surface conditions for gear teeth have not yet been established. When a detrimental surface finish effect is known to exist, AGMA specifies a value of C_f greater than unity.

⁸An extensive list of service factors appears in Howard B. Schwerdlin, "Couplings," Chap. 16 in Joseph E. Shigley, Charles R. Mischke, and Thomas H. Brown, Jr. (eds.), *Standard Handbook of Machine Design*, 3rd ed., McGraw-Hill, New York, 2004.

14-10 Size Factor K_s

The size factor reflects nonuniformity of material properties due to size. It depends upon

- Tooth size
- Diameter of part
- Ratio of tooth size to diameter of part
- Face width
- Area of stress pattern
- Ratio of case depth to tooth size
- Hardenability and heat treatment

Standard size factors for gear teeth have not yet been established for cases where there is a detrimental size effect. In such cases AGMA recommends a size factor greater than unity. If there is no detrimental size effect, use unity.

AGMA has identified and provided a symbol for size factor. Also, AGMA suggests $K_s = 1$, which makes K_s a placeholder in Eqs. (14-15) and (14-16) until more information is gathered. Following the standard in this manner is a failure to apply all of your knowledge. From Table 13-1, $l = a + b = 2.25/P$. The tooth thickness t in Fig. 14-6 is given in Sec. 14-1, Eq. (b), as $t = \sqrt{4lx}$ where $x = 3Y/(2P)$ from Eq. (14-3). From Eq. (6-25) the equivalent diameter d_e of a rectangular section in bending is $d_e = 0.808\sqrt{Ft}$. From Eq. (6-20) $k_b = (d_e/0.3)^{-0.107}$. Noting that K_s is the reciprocal of k_b , we find the result of all the algebraic substitution is

$$K_s = \frac{1}{k_b} = 1.192 \left(\frac{F\sqrt{Y}}{P} \right)^{0.0535} \quad (a)$$

K_s can be viewed as Lewis's geometry incorporated into the Marin size factor in fatigue. You may set $K_s = 1$, or you may elect to use the preceding Eq. (a). This is a point to discuss with your instructor. We will use Eq. (a) to remind you that you have a choice. If K_s in Eq. (a) is less than 1, use $K_s = 1$.

14-11 Load-Distribution Factor K_m (KH)

The load-distribution factor modified the stress equations to reflect nonuniform distribution of load across the line of contact. The ideal is to locate the gear "midspan" between two bearings at the zero slope place when the load is applied. However, this is not always possible. The following procedure is applicable to

- Net face width to pinion pitch diameter ratio $F/d \leq 2$
- Gear elements mounted between the bearings
- Face widths up to 40 in
- Contact, when loaded, across the full width of the narrowest member

The load-distribution factor under these conditions is currently given by the *face load distribution factor*, C_{mf} , where

$$K_m = C_{mf} = 1 + C_{mc}(C_{pf}C_{pm} + C_{ma}C_e) \quad (14-30)$$

where

$$C_{mc} = \begin{cases} 1 & \text{for uncrowned teeth} \\ 0.8 & \text{for crowned teeth} \end{cases} \quad (14-31)$$

$$C_{pf} = \begin{cases} \frac{F}{10d} - 0.025 & F \leq 1 \text{ in} \\ \frac{F}{10d} - 0.0375 + 0.0125F & 1 < F \leq 17 \text{ in} \\ \frac{F}{10d} - 0.1109 + 0.0207F - 0.000228F^2 & 17 < F \leq 40 \text{ in} \end{cases} \quad (14-32)$$

Note that for values of $F/(10d) < 0.05$, $F/(10d) = 0.05$ is used.

$$C_{pm} = \begin{cases} 1 & \text{for straddle-mounted pinion with } S_1/S < 0.175 \\ 1.1 & \text{for straddle-mounted pinion with } S_1/S \geq 0.175 \end{cases} \quad (14-33)$$

$$C_{ma} = A + BF + CF^2 \quad (\text{see Table 14-9 for values of } A, B, \text{ and } C) \quad (14-34)$$

$$C_e = \begin{cases} 0.8 & \text{for gearing adjusted at assembly, or compatibility} \\ & \text{is improved by lapping, or both} \\ 1 & \text{for all other conditions} \end{cases} \quad (14-35)$$

See Fig. 14-10 for definitions of S and S_1 for use with Eq. (14-33), and see Fig. 14-11 for graph of C_{ma} .

Table 14-9

Empirical Constants
 A , B , and C for
Eq. (14-34), Face
Width F in Inches*

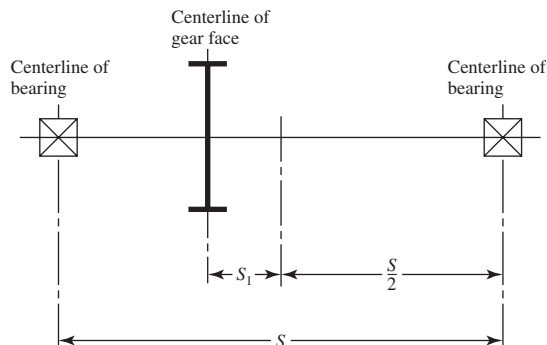
Source: ANSI/AGMA
2001-D04.

Condition	A	B	C
Open gearing	0.247	0.0167	$-0.765(10^{-4})$
Commercial, enclosed units	0.127	0.0158	$-0.930(10^{-4})$
Precision, enclosed units	0.0675	0.0128	$-0.926(10^{-4})$
Extraprecision enclosed gear units	0.00360	0.0102	$-0.822(10^{-4})$

*See ANSI/AGMA 2101-D04, pp. 20–22, for SI formulation.

Figure 14-10

Definition of distances S and
 S_1 used in evaluating C_{pm} ,
Eq. (14-33). (ANSI/AGMA
2001-D04.)



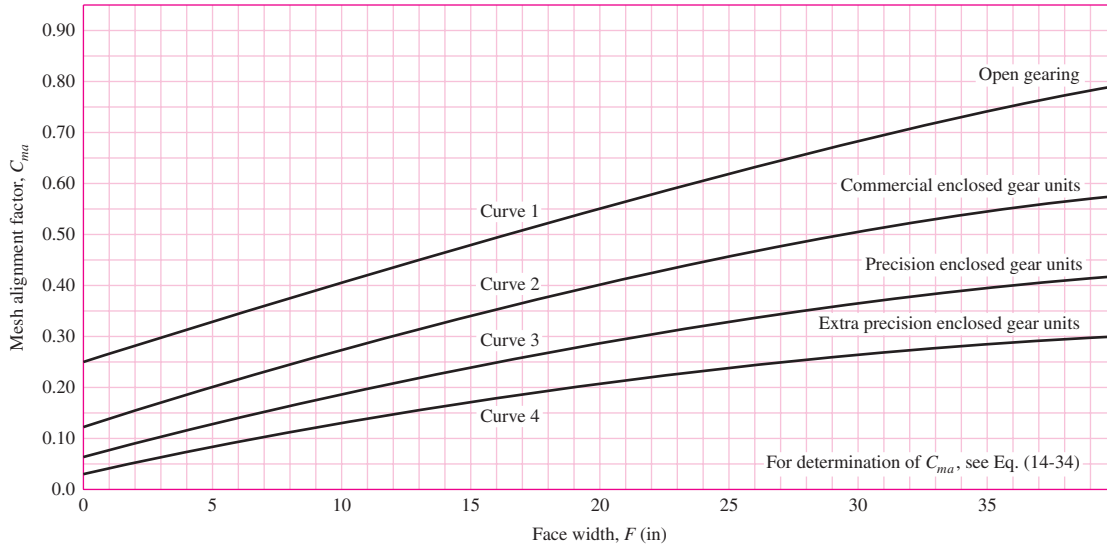


Figure 14-11

Mesh alignment factor C_{ma} . Curve-fit equations in Table 14-9. (ANSI/AGMA 2001-D04.)

14-12 Hardness-Ratio Factor C_H

The pinion generally has a smaller number of teeth than the gear and consequently is subjected to more cycles of contact stress. If both the pinion and the gear are through-hardened, then a uniform surface strength can be obtained by making the pinion harder than the gear. A similar effect can be obtained when a surface-hardened pinion is mated with a through-hardened gear. The hardness-ratio factor C_H is used *only for the gear*. Its purpose is to adjust the surface strengths for this effect. The values of C_H are obtained from the equation

$$C_H = 1.0 + A'(m_G - 1.0) \quad (14-36)$$

where

$$A' = 8.98(10^{-3}) \left(\frac{H_{BP}}{H_{BG}} \right) - 8.29(10^{-3}) \quad 1.2 \leq \frac{H_{BP}}{H_{BG}} \leq 1.7$$

The terms H_{BP} and H_{BG} are the Brinell hardness (10-mm ball at 3000-kg load) of the pinion and gear, respectively. The term m_G is the speed ratio and is given by Eq. (14-22). See Fig. 14-12 for a graph of Eq. (14-36). For

$$\frac{H_{BP}}{H_{BG}} < 1.2, \quad A' = 0$$

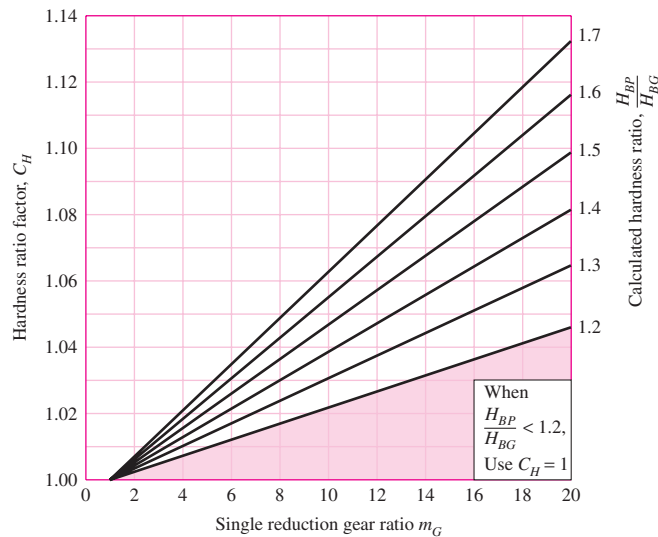
$$\frac{H_{BP}}{H_{BG}} > 1.7, \quad A' = 0.00698$$

When surface-hardened pinions with hardnesses of 48 Rockwell C scale (Rockwell C48) or harder are run with through-hardened gears (180–400 Brinell), a work hardening occurs. The C_H factor is a function of pinion surface finish f_P and the mating gear hardness. Figure 14-13 displays the relationships:

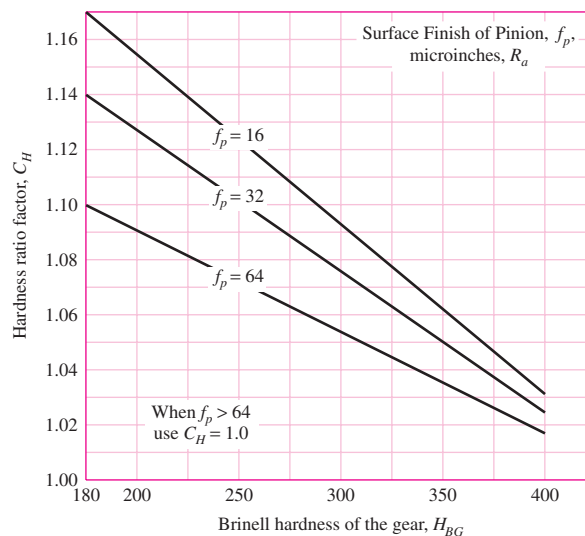
$$C_H = 1 + B'(450 - H_{BG}) \quad (14-37)$$

Figure 14-12

Hardness ratio factor C_H
(through-hardened steel).
(ANSI/AGMA 2001-D04.)

**Figure 14-13**

Hardness ratio factor C_H
(surface-hardened steel
pinion). (ANSI/AGMA 2001-
D04.)



where $B' = 0.00075 \exp[-0.0112f_p]$ and f_p is the surface finish of the pinion expressed as root-mean-square roughness R_a in μ in.

14-13 Stress Cycle Factors Y_N and Z_N

The AGMA strengths as given in Figs. 14-2 through 14-4, in Tables 14-3 and 14-4 for bending fatigue, and in Fig. 14-5 and Tables 14-5 and 14-6 for contact-stress fatigue are based on 10^7 load cycles applied. The purpose of the load cycle factors Y_N and Z_N is to modify the gear strength for lives other than 10^7 cycles. Values for these factors are given in Figs. 14-14 and 14-15. Note that for 10^7 cycles $Y_N = Z_N = 1$ on each graph. Note also that the equations for Y_N and Z_N change on either side of 10^7 cycles. For life goals slightly higher than 10^7 cycles, the mating gear may be experiencing fewer than 10^7 cycles and the equations for $(Y_N)_P$ and $(Y_N)_G$ can be different. The same comment applies to $(Z_N)_P$ and $(Z_N)_G$.

Figure 14-14

Repeatedly applied bending strength stress-cycle factor Y_N . (ANSI/AGMA 2001-D04.)

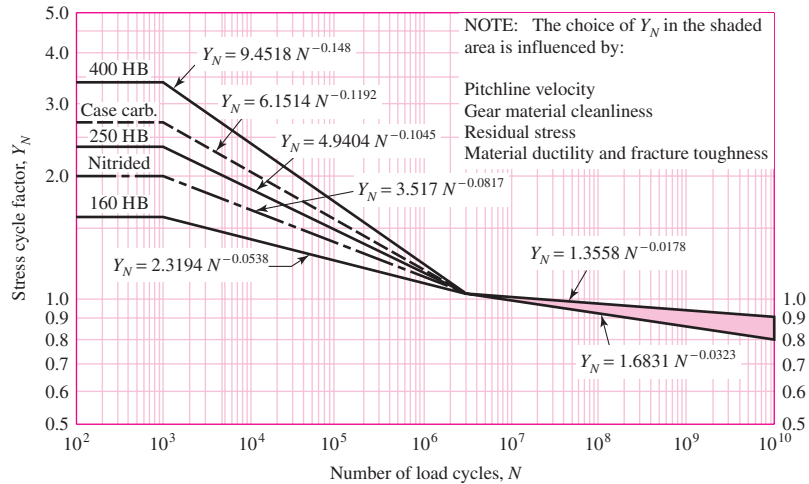
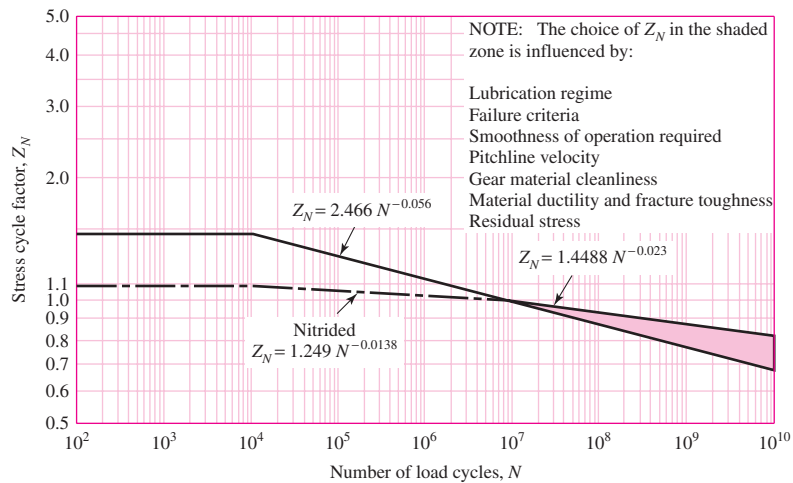


Figure 14-15

Pitting resistance stress-cycle factor Z_N . (ANSI/AGMA 2001-D04.)



14-14 Reliability Factor K_R (Y_Z)

The reliability factor accounts for the effect of the statistical distributions of material fatigue failures. Load variation is not addressed here. The gear strengths S_t and S_c are based on a reliability of 99 percent. Table 14-10 is based on data developed by the U.S. Navy for bending and contact-stress fatigue failures.

The functional relationship between K_R and reliability is highly nonlinear. When interpolation is required, linear interpolation is too crude. A log transformation to each quantity produces a linear string. A least-squares regression fit is

$$K_R = \begin{cases} 0.658 - 0.0759 \ln(1 - R) & 0.5 < R < 0.99 \\ 0.50 - 0.109 \ln(1 - R) & 0.99 \leq R \leq 0.9999 \end{cases} \quad (14-38)$$

For cardinal values of R , take K_R from the table. Otherwise use the logarithmic interpolation afforded by Eqs. (14-38).

Table 14-10Reliability Factors $K_R(Y_Z)$ Source: ANSI/AGMA
2001-D04.

Reliability	$K_R(Y_Z)$
0.9999	1.50
0.999	1.25
0.99	1.00
0.90	0.85
0.50	0.70

14-15 Temperature Factor $K_T(Y_\theta)$

For oil or gear-blank temperatures up to 250°F (120°C), use $K_T = Y_\theta = 1.0$. For higher temperatures, the factor should be greater than unity. Heat exchangers may be used to ensure that operating temperatures are considerably below this value, as is desirable for the lubricant.

14-16 Rim-Thickness Factor K_B

When the rim thickness is not sufficient to provide full support for the tooth root, the location of bending fatigue failure may be through the gear rim rather than at the tooth fillet. In such cases, the use of a stress-modifying factor K_B or (t_R) is recommended. This factor, the *rim-thickness factor* K_B , adjusts the estimated bending stress for the thin-rimmed gear. It is a function of the backup ratio m_B ,

$$m_B = \frac{t_R}{h_t} \quad (14-39)$$

where t_R = rim thickness below the tooth, in, and h_t = the tooth height. The geometry is depicted in Fig. 14-16. The rim-thickness factor K_B is given by

$$K_B = \begin{cases} 1.6 \ln \frac{2.242}{m_B} & m_B < 1.2 \\ 1 & m_B \geq 1.2 \end{cases} \quad (14-40)$$

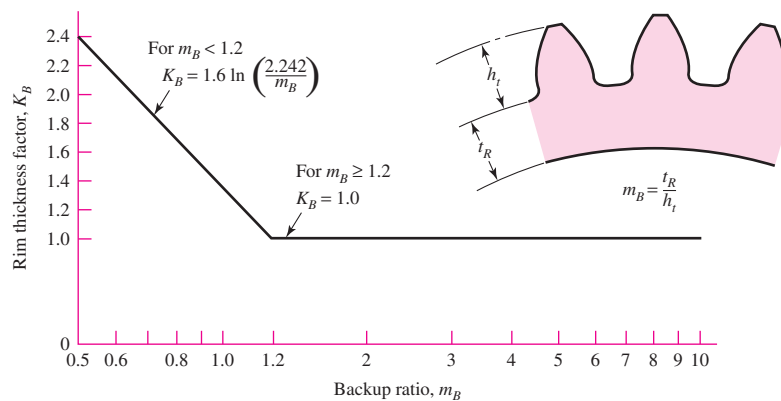
Figure 14-16Rim thickness factor K_B .
(ANSI/AGMA 2001-D04.)

Figure 14–16 also gives the value of K_B graphically. The rim-thickness factor K_B is applied in addition to the 0.70 reverse-loading factor when applicable.

14–17 Safety Factors S_F and S_H

The ANSI/AGMA standards 2001-D04 and 2101-D04 contain a safety factor S_F guarding against bending fatigue failure and safety factor S_H guarding against pitting failure.

The definition of S_F , from Eq. (14–17), is

$$S_F = \frac{S_t Y_N / (K_T K_R)}{\sigma} = \frac{\text{fully corrected bending strength}}{\text{bending stress}} \quad (14-41)$$

where σ is estimated from Eq. (14–15). It is a strength-over-stress definition in a case where the stress is linear with the transmitted load.

The definition of S_H , from Eq. (14–18), is

$$S_H = \frac{S_c Z_N C_H / (K_T K_R)}{\sigma_c} = \frac{\text{fully corrected contact strength}}{\text{contact stress}} \quad (14-42)$$

when σ_c is estimated from Eq. (14–16). This, too, is a strength-over-stress definition but in a case where the stress is *not* linear with the transmitted load W^t .

While the definition of S_H does not interfere with its intended function, a caution is required when comparing S_F with S_H in an analysis in order to ascertain the nature and severity of the threat to loss of function. To render S_H linear with the transmitted load, W^t it could have been defined as

$$S_H = \left(\frac{\text{fully corrected contact strength}}{\text{contact stress imposed}} \right)^2 \quad (14-43)$$

with the exponent 2 for linear or helical contact, or an exponent of 3 for crowned teeth (spherical contact). With the definition, Eq. (14–42), compare S_F with S_H^2 (or S_H^3 for crowned teeth) when trying to identify the threat to loss of function with confidence.

The role of the overload factor K_o is to include predictable excursions of load beyond W^t based on experience. A safety factor is intended to account for unquantifiable elements in addition to K_o . When designing a gear mesh, the quantity S_F becomes a design factor $(S_F)_d$ within the meanings used in this book. The quantity S_F evaluated as part of a design assessment is a factor of safety. This applies equally well to the quantity S_H .

14–18 Analysis

Description of the procedure based on the AGMA standard is highly detailed. The best review is a “road map” for bending fatigue and contact-stress fatigue. Figure 14–17 identifies the bending stress equation, the endurance strength in bending equation, and the factor of safety S_F . Figure 14–18 displays the contact-stress equation, the contact fatigue endurance strength equation, and the factor of safety S_H . When analyzing a gear problem, this figure is a useful reference.

The following example of a gear mesh analysis is intended to make all the details presented concerning the AGMA method more familiar.

SPUR GEAR BENDING
BASED ON ANSI/AGMA 2001-D04

$$d_p = \frac{N_p}{P_d}$$

$$V = \frac{\pi d n}{12}$$

$$W^t = \frac{33\,000 H}{V}$$

$$\sigma = W^t K_o K_v K_s \frac{P_d}{F} \frac{K_m K_B}{J}$$

Gear bending stress equation Eq. (14–15)
 1 [or Eq. (a), Sec. 14–10]; p. 739
 Eq. (14–30); p. 739
 Eq. (14–40); p. 744
 Fig. 14–6; p. 733
 Eq. (14–27); p. 736
 Table below

$$0.99(S_t)_{10^7} \text{ Tables 14–3, 14–4; pp. 728, 729}$$

Gear bending endurance strength equation Eq. (14–17)

$$\sigma_{\text{all}} = \frac{S_t}{S_F} \frac{Y_N}{K_T K_R}$$

Fig. 14–14; p. 743
 Table 14–10, Eq. (14–38); pp. 744, 743
 1 if $T < 250^\circ\text{F}$

Bending factor of safety Eq. (14–41)

$$S_F = \frac{S_t Y_N / (K_T K_R)}{\sigma}$$

Remember to compare S_F with S_H^2 when deciding whether bending or wear is the threat to function. For crowned gears compare S_F with S_H^3 .

Table of Overload Factors, K_o

Power source	Driven Machine		
	Uniform	Moderate shock	Heavy shock
Uniform	1.00	1.25	1.75
Light shock	1.25	1.50	2.00
Medium shock	1.50	1.75	2.25

Figure 14-17

Roadmap of gear bending equations based on AGMA standards. (ANSI/AGMA 2001-D04.)

SPUR GEAR WEAR
BASED ON ANSI/AGMA 2001-D04

$$d_p = \frac{N_p}{P_d}$$

$$V = \frac{\pi d n}{12}$$

$$W^t = \frac{33\,000 H}{V}$$

$$\sigma_c = C_p \left(W^t K_o K_v K_s \frac{K_m C_f}{d_p F} \right)^{1/2}$$

Gear
contact
stress
equation
Eq. (14–16)

Eq. (14–13), Table 14–8; pp. 724, 737

1 [or Eq. (a), Sec. 14–10]; p. 739

Eq. (14–30); p. 739

1

Eq. (14–23); p. 735

Eq. (14–27); p. 736

Table below

$0.99(S_c)_{10^7}$ Tables, 14–6, 14–7; pp. 731, 732

Fig. 14–15; p. 743

Gear
contact
endurance
strength
Eq. (14–18)

$$\sigma_{c,all} = \frac{S_c Z_N C_H}{S_H K_T K_R}$$

Section 14–12, gear only; pp. 741, 742

Table 14–10, Eqs. (14–38); pp. 744, 743

1 if $T < 250^\circ\text{F}$

Wear
factor of
safety
Eq. (14–42)

$$S_H = \frac{S_c Z_N C_H / (K_T K_R)}{\sigma_c}$$

Gear only

Remember to compare S_F with S_H^2 when deciding whether bending or wear is the threat to function. For crowned gears compare S_F with S_H^3 .

Table of Overload Factors, K_o

Power source	Driven Machine		
	Uniform	Moderate shock	Heavy shock
Uniform	1.00	1.25	1.75
Light shock	1.25	1.50	2.00
Medium shock	1.50	1.75	2.25

Figure 14-18

Roadmap of gear wear equations based on AGMA standards. (ANSI/AGMA 2001-D04.)

EXAMPLE 14-4

A 17-tooth 20° pressure angle spur pinion rotates at 1800 rev/min and transmits 4 hp to a 52-tooth disk gear. The diametral pitch is 10 teeth/in, the face width 1.5 in, and the quality standard is No. 6. The gears are straddle-mounted with bearings immediately adjacent. The pinion is a grade 1 steel with a hardness of 240 Brinell tooth surface and through-hardened core. The gear is steel, through-hardened also, grade 1 material, with a Brinell hardness of 200, tooth surface and core. Poisson's ratio is 0.30, $J_P = 0.30$, $J_G = 0.40$, and Young's modulus is $30(10^6)$ psi. The loading is smooth because of motor and load. Assume a pinion life of 10^8 cycles and a reliability of 0.90, and use $Y_N = 1.3558N^{-0.0178}$, $Z_N = 1.4488N^{-0.023}$. The tooth profile is uncrowned. This is a commercial enclosed gear unit.

- Find the factor of safety of the gears in bending.
- Find the factor of safety of the gears in wear.
- By examining the factors of safety, identify the threat to each gear and to the mesh.

Solution

There will be many terms to obtain so use Figs. 14–17 and 14–18 as guides to what is needed.

$$d_P = N_P/P_d = 17/10 = 1.7 \text{ in} \quad d_G = 52/10 = 5.2 \text{ in}$$

$$V = \frac{\pi d_P n_P}{12} = \frac{\pi(1.7)1800}{12} = 801.1 \text{ ft/min}$$

$$W^t = \frac{33\,000 H}{V} = \frac{33\,000(4)}{801.1} = 164.8 \text{ lbf}$$

Assuming uniform loading, $K_o = 1$. To evaluate K_v , from Eq. (14–28) with a quality number $Q_v = 6$,

$$B = 0.25(12 - 6)^{2/3} = 0.8255$$

$$A = 50 + 56(1 - 0.8255) = 59.77$$

Then from Eq. (14–27) the dynamic factor is

$$K_v = \left(\frac{59.77 + \sqrt{801.1}}{59.77} \right)^{0.8255} = 1.377$$

To determine the size factor, K_s , the Lewis form factor is needed. From Table 14–2, with $N_P = 17$ teeth, $Y_P = 0.303$. Interpolation for the gear with $N_G = 52$ teeth yields $Y_G = 0.412$. Thus from Eq. (a) of Sec. 14–10, with $F = 1.5$ in,

$$(K_s)_P = 1.192 \left(\frac{1.5\sqrt{0.303}}{10} \right)^{0.0535} = 1.043$$

$$(K_s)_G = 1.192 \left(\frac{1.5\sqrt{0.412}}{10} \right)^{0.0535} = 1.052$$

The load distribution factor K_m is determined from Eq. (14–30), where five terms are needed. They are, where $F = 1.5$ in when needed:

Uncrowned, Eq. (14–30): $C_{mc} = 1$,
 Eq. (14–32): $C_{pf} = 1.5/[10(1.7)] - 0.0375 + 0.0125(1.5) = 0.0695$
 Bearings immediately adjacent, Eq. (14–33): $C_{pm} = 1$
 Commercial enclosed gear units (Fig. 14–11): $C_{ma} = 0.15$
 Eq. (14–35): $C_e = 1$

Thus,

$$K_m = 1 + C_{mc}(C_{pf}C_{pm} + C_{ma}C_e) = 1 + (1)[0.0695(1) + 0.15(1)] = 1.22$$

Assuming constant thickness gears, the rim-thickness factor $K_B = 1$. The speed ratio is $m_G = N_G/N_P = 52/17 = 3.059$. The load cycle factors given in the problem statement, with $N(\text{pinion}) = 10^8$ cycles and $N(\text{gear}) = 10^8/m_G = 10^8/3.059$ cycles, are

$$(Y_N)_P = 1.3558(10^8)^{-0.0178} = 0.977$$

$$(Y_N)_G = 1.3558(10^8/3.059)^{-0.0178} = 0.996$$

From Table 14.10, with a reliability of 0.9, $K_R = 0.85$. From Fig. 14–18, the temperature and surface condition factors are $K_T = 1$ and $C_f = 1$. From Eq. (14–23), with $m_N = 1$ for spur gears,

$$I = \frac{\cos 20^\circ \sin 20^\circ}{2} \frac{3.059}{3.059 + 1} = 0.121$$

From Table 14–8, $C_p = 2300\sqrt{\text{psi}}$.

Next, we need the terms for the gear endurance strength equations. From Table 14–3, for grade 1 steel with $H_{BP} = 240$ and $H_{BG} = 200$, we use Fig. 14–2, which gives

$$(S_t)_P = 77.3(240) + 12\,800 = 31\,350 \text{ psi}$$

$$(S_t)_G = 77.3(200) + 12\,800 = 28\,260 \text{ psi}$$

Similarly, from Table 14–6, we use Fig. 14–5, which gives

$$(S_c)_P = 322(240) + 29\,100 = 106\,400 \text{ psi}$$

$$(S_c)_G = 322(200) + 29\,100 = 93\,500 \text{ psi}$$

From Fig. 14–15,

$$(Z_N)_P = 1.4488(10^8)^{-0.023} = 0.948$$

$$(Z_N)_G = 1.4488(10^8/3.059)^{-0.023} = 0.973$$

For the hardness ratio factor C_H , the hardness ratio is $H_{BP}/H_{BG} = 240/200 = 1.2$. Then, from Sec. 14–12,

$$\begin{aligned}
 A' &= 8.98(10^{-3})(H_{BP}/H_{BG}) - 8.29(10^{-3}) \\
 &= 8.98(10^{-3})(1.2) - 8.29(10^{-3}) = 0.00249
 \end{aligned}$$

Thus, from Eq. (14–36),

$$C_H = 1 + 0.00249(3.059 - 1) = 1.005$$

(a) **Pinion tooth bending.** Substituting the appropriate terms for the pinion into Eq. (14–15) gives

$$(\sigma)_P = \left(W^t K_o K_v K_s \frac{P_d K_m K_B}{F J} \right)_P = 164.8(1)1.377(1.043) \frac{10}{1.5} \frac{1.22(1)}{0.30}$$

$$= 6417 \text{ psi}$$

Substituting the appropriate terms for the pinion into Eq. (14–41) gives

Answer

$$(S_F)_P = \left(\frac{S_t Y_N / (K_T K_R)}{\sigma} \right)_P = \frac{31\,350(0.977) / [1(0.85)]}{6417} = 5.62$$

Gear tooth bending. Substituting the appropriate terms for the gear into Eq. (14–15) gives

$$(\sigma)_G = 164.8(1)1.377(1.052) \frac{10}{1.5} \frac{1.22(1)}{0.40} = 4854 \text{ psi}$$

Substituting the appropriate terms for the gear into Eq. (14–41) gives

Answer

$$(S_F)_G = \frac{28\,260(0.996) / [1(0.85)]}{4854} = 6.82$$

(b) **Pinion tooth wear.** Substituting the appropriate terms for the pinion into Eq. (14–16) gives

$$(\sigma_c)_P = C_p \left(W^t K_o K_v K_s \frac{K_m C_f}{d_P F I} \right)_P^{1/2}$$

$$= 2300 \left[164.8(1)1.377(1.043) \frac{1.22}{1.7(1.5)} \frac{1}{0.121} \right]^{1/2} = 70\,360 \text{ psi}$$

Substituting the appropriate terms for the pinion into Eq. (14–42) gives

Answer

$$(S_H)_P = \left[\frac{S_c Z_N / (K_T K_R)}{\sigma_c} \right]_P = \frac{106\,400(0.948) / [1(0.85)]}{70\,360} = 1.69$$

Gear tooth wear. The only term in Eq. (14–16) that changes for the gear is K_s . Thus,

$$(\sigma_c)_G = \left[\frac{(K_s)_G}{(K_s)_P} \right]^{1/2} (\sigma_c)_P = \left(\frac{1.052}{1.043} \right)^{1/2} 70\,360 = 70\,660 \text{ psi}$$

Substituting the appropriate terms for the gear into Eq. (14–42) with $C_H = 1.005$ gives

Answer

$$(S_H)_G = \frac{93\,500(0.973)1.005 / [1(0.85)]}{70\,660} = 1.52$$

(c) For the pinion, we compare $(S_F)_P$ with $(S_H)_P^2$, or 5.73 with $1.69^2 = 2.86$, so the threat in the pinion is from wear. For the gear, we compare $(S_F)_G$ with $(S_H)_G^2$, or 6.96 with $1.52^2 = 2.31$, so the threat in the gear is also from wear.

There are perspectives to be gained from Ex. 14–4. First, the pinion is overly strong in bending compared to wear. The performance in wear can be improved by surface-hardening techniques, such as flame or induction hardening, nitriding, or carburizing

and case hardening, as well as shot peening. This in turn permits the gearset to be made smaller. Second, in bending, the gear is stronger than the pinion, indicating that both the gear core hardness and tooth size could be reduced; that is, we may increase P and reduce diameter of the gears, or perhaps allow a cheaper material. Third, in wear, surface strength equations have the ratio $(Z_N)/K_R$. The values of $(Z_N)_P$ and $(Z_N)_G$ are affected by gear ratio m_G . The designer can control strength by specifying surface hardness. This point will be elaborated later.

Having followed a spur-gear analysis in detail in Ex. 14–4, it is timely to analyze a helical gearset under similar circumstances to observe similarities and differences.

EXAMPLE 14–5

A 17-tooth 20° normal pitch-angle helical pinion with a right-hand helix angle of 30° rotates at 1800 rev/min when transmitting 4 hp to a 52-tooth helical gear. The normal diametral pitch is 10 teeth/in, the face width is 1.5 in, and the set has a quality number of 6. The gears are straddle-mounted with bearings immediately adjacent. The pinion and gear are made from a through-hardened steel with surface and core hardnesses of 240 Brinell on the pinion and surface and core hardnesses of 200 Brinell on the gear. The transmission is smooth, connecting an electric motor and a centrifugal pump. Assume a pinion life of 10^8 cycles and a reliability of 0.9 and use the upper curves in Figs. 14–14 and 14–15.

- Find the factors of safety of the gears in bending.
- Find the factors of safety of the gears in wear.
- By examining the factors of safety identify the threat to each gear and to the mesh.

Solution

All of the parameters in this example are the same as in Ex. 14–4 with the exception that we are using helical gears. Thus, several terms will be the same as Ex. 14–4. The reader should verify that the following terms remain unchanged: $K_o = 1$, $Y_P = 0.303$, $Y_G = 0.412$, $m_G = 3.059$, $(K_s)_P = 1.043$, $(K_s)_G = 1.052$, $(Y_N)_P = 0.977$, $(Y_N)_G = 0.996$, $K_R = 0.85$, $K_T = 1$, $C_f = 1$, $C_p = 2300 \sqrt{\text{psi}}$, $(S_t)_P = 31\,350$ psi, $(S_t)_G = 28\,260$ psi, $(S_c)_P = 106\,380$ psi, $(S_c)_G = 93\,500$ psi, $(Z_N)_P = 0.948$, $(Z_N)_G = 0.973$, and $C_H = 1.005$.

For helical gears, the transverse diametral pitch, given by Eq. (13–18), is

$$P_t = P_n \cos \psi = 10 \cos 30^\circ = 8.660 \text{ teeth/in}$$

Thus, the pitch diameters are $d_P = N_P/P_t = 17/8.660 = 1.963$ in and $d_G = 52/8.660 = 6.005$ in. The pitch-line velocity and transmitted force are

$$V = \frac{\pi d_P n_P}{12} = \frac{\pi(1.963)1800}{12} = 925 \text{ ft/min}$$

$$W^t = \frac{33\,000H}{V} = \frac{33\,000(4)}{925} = 142.7 \text{ lbf}$$

As in Ex. 14–4, for the dynamic factor, $B = 0.8255$ and $A = 59.77$. Thus, Eq. (14–27) gives

$$K_v = \left(\frac{59.77 + \sqrt{925}}{59.77} \right)^{0.8255} = 1.404$$

The geometry factor I for helical gears requires a little work. First, the transverse pressure

angle is given by Eq. (13–19)

$$\phi_t = \tan^{-1} \left(\frac{\tan \phi_n}{\cos \psi} \right) = \tan^{-1} \left(\frac{\tan 20^\circ}{\cos 30^\circ} \right) = 22.80^\circ$$

The radii of the pinion and gear are $r_P = 1.963/2 = 0.9815$ in and $r_G = 6.004/2 = 3.002$ in, respectively. The addendum is $a = 1/P_n = 1/10 = 0.1$, and the base-circle radii of the pinion and gear are given by Eq. (13–6) with $\phi = \phi_t$:

$$(r_b)_P = r_P \cos \phi_t = 0.9815 \cos 22.80^\circ = 0.9048 \text{ in}$$

$$(r_b)_G = 3.002 \cos 22.80^\circ = 2.767 \text{ in}$$

From Eq. (14–25), the surface strength geometry factor

$$\begin{aligned} Z &= \sqrt{(0.9815 + 0.1)^2 - 0.9048^2} + \sqrt{(3.004 + 0.1)^2 - 2.769^2} \\ &\quad - (0.9815 + 3.004) \sin 22.80^\circ \\ &= 0.5924 + 1.4027 - 1.5444 = 0.4507 \text{ in} \end{aligned}$$

Since the first two terms are less than 1.5444, the equation for Z stands. From Eq. (14–24) the normal circular pitch p_N is

$$p_N = p_n \cos \phi_n = \frac{\pi}{P_n} \cos 20^\circ = \frac{\pi}{10} \cos 20^\circ = 0.2952 \text{ in}$$

From Eq. (14–21), the load sharing ratio

$$m_N = \frac{p_N}{0.95Z} = \frac{0.2952}{0.95(0.4507)} = 0.6895$$

Substituting in Eq. (14–23), the geometry factor I is

$$I = \frac{\sin 22.80^\circ \cos 22.80^\circ}{2(0.6895)} \frac{3.06}{3.06 + 1} = 0.195$$

From Fig. 14–7, geometry factors $J'_P = 0.45$ and $J'_G = 0.54$. Also from Fig. 14–8 the J -factor multipliers are 0.94 and 0.98, correcting J'_P and J'_G to

$$J_P = 0.45(0.94) = 0.423$$

$$J_G = 0.54(0.98) = 0.529$$

The load-distribution factor K_m is estimated from Eq. (14–32):

$$C_{pf} = \frac{1.5}{10(1.963)} - 0.0375 + 0.0125(1.5) = 0.0577$$

with $C_{mc} = 1$, $C_{pm} = 1$, $C_{ma} = 0.15$ from Fig. 14–11, and $C_e = 1$. Therefore, from Eq. (14–30),

$$K_m = 1 + (1)[0.0577(1) + 0.15(1)] = 1.208$$

(a) **Pinion tooth bending.** Substituting the appropriate terms into Eq. (14–15) using P_t gives

$$\begin{aligned} (\sigma)_P &= \left(W^t K_o K_v K_s \frac{P_t K_m K_B}{F J} \right)_P = 142.7(1)1.404(1.043) \frac{8.66}{1.5} \frac{1.208(1)}{0.423} \\ &= 3445 \text{ psi} \end{aligned}$$

Substituting the appropriate terms for the pinion into Eq. (14–41) gives

Answer
$$(S_F)_P = \left(\frac{S_t Y_N / (K_T K_R)}{\sigma} \right)_P = \frac{31\,350(0.977) / [1(0.85)]}{3445} = 10.5$$

Gear tooth bending. Substituting the appropriate terms for the gear into Eq. (14–15) gives

$$(\sigma)_G = 142.7(1)1.404(1.052) \frac{8.66}{1.5} \frac{1.208(1)}{0.529} = 2779 \text{ psi}$$

Substituting the appropriate terms for the gear into Eq. (14–41) gives

Answer
$$(S_F)_G = \frac{28\,260(0.996) / [1(0.85)]}{2779} = 11.9$$

(b) **Pinion tooth wear.** Substituting the appropriate terms for the pinion into Eq. (14–16) gives

$$\begin{aligned} (\sigma_c)_P &= C_p \left(W' K_o K_v K_s \frac{K_m C_f}{d_P F I} \right)_P^{1/2} \\ &= 2300 \left[142.7(1)1.404(1.043) \frac{1.208}{1.963(1.5)} \frac{1}{0.195} \right]^{1/2} = 48\,230 \text{ psi} \end{aligned}$$

Substituting the appropriate terms for the pinion into Eq. (14–42) gives

Answer
$$(S_H)_P = \left(\frac{S_c Z_N / (K_T K_R)}{\sigma_c} \right)_P = \frac{106\,400(0.948) / [1(0.85)]}{48\,230} = 2.46$$

Gear tooth wear. The only term in Eq. (14–16) that changes for the gear is K_s . Thus,

$$(\sigma_c)_G = \left[\frac{(K_s)_G}{(K_s)_P} \right]^{1/2} (\sigma_c)_P = \left(\frac{1.052}{1.043} \right)^{1/2} 48\,230 = 48\,440 \text{ psi}$$

Substituting the appropriate terms for the gear into Eq. (14–42) with $C_H = 1.005$ gives

Answer
$$(S_H)_G = \frac{93\,500(0.973)1.005 / [1(0.85)]}{48\,440} = 2.22$$

(c) For the pinion we compare S_F with S_H^2 , or 10.5 with $2.46^2 = 6.05$, so the threat in the pinion is from wear. For the gear we compare S_F with S_H^2 , or 11.9 with $2.22^2 = 4.93$, so the threat is also from wear in the gear. For the meshing gears wear controls.

It is worthwhile to compare Ex. 14–4 with Ex. 14–5. The spur and helical gears were placed in nearly identical circumstances. The helical gear teeth are of greater length because of the helix and identical face widths. The pitch diameters of the helical gears are larger. The J factors and the I factor are larger, thereby reducing stresses. The result is larger factors of safety. In the design phase the gears in Ex. 14–4 and Ex. 14–5 can be made smaller with control of materials and relative hardnesses.

Now that examples have given the AGMA parameters substance, it is time to examine some desirable (and necessary) relationships between material properties of spur

gears in mesh. In bending, the AGMA equations are displayed side by side:

$$\sigma_P = \left(W^t K_o K_v K_s \frac{P_d K_m K_B}{F J} \right)_P \quad \sigma_G = \left(W^t K_o K_v K_s \frac{P_d K_m K_B}{F J} \right)_G$$

$$(S_F)_P = \left(\frac{S_t Y_N / (K_T K_R)}{\sigma} \right)_P \quad (S_F)_G = \left(\frac{S_t Y_N / (K_T K_R)}{\sigma} \right)_G$$

Equating the factors of safety, substituting for stress and strength, canceling identical terms (K_s virtually equal or exactly equal), and solving for $(S_t)_G$ gives

$$(S_t)_G = (S_t)_P \frac{(Y_N)_P J_P}{(Y_N)_G J_G} \quad (a)$$

The stress-cycle factor Y_N comes from Fig. 14–14, where for a particular hardness, $Y_N = \alpha N^\beta$. For the pinion, $(Y_N)_P = \alpha N_P^\beta$, and for the gear, $(Y_N)_G = \alpha (N_P/m_G)^\beta$. Substituting these into Eq. (a) and simplifying gives

$$(S_t)_G = (S_t)_P m_G^\beta \frac{J_P}{J_G} \quad (14-44)$$

Normally, $m_G > 1$ and $J_G > J_P$, so equation (14–44) shows that the gear can be less strong (lower Brinell hardness) than the pinion for the same safety factor.

EXAMPLE 14-6

In a set of spur gears, a 300-Brinell 18-tooth 16-pitch 20° full-depth pinion meshes with a 64-tooth gear. Both gear and pinion are of grade 1 through-hardened steel. Using $\beta = -0.023$, what hardness can the gear have for the same factor of safety?

Solution

For through-hardened grade 1 steel the pinion strength $(S_t)_P$ is given in Fig. 14–2:

$$(S_t)_P = 77.3(300) + 12\,800 = 35\,990 \text{ psi}$$

From Fig. 14–6 the form factors are $J_P = 0.32$ and $J_G = 0.41$. Equation (14–44) gives

$$(S_t)_G = 35\,990 \left(\frac{64}{18} \right)^{-0.023} \frac{0.32}{0.41} = 27\,280 \text{ psi}$$

Use the equation in Fig. 14–2 again.

Answer

$$(H_B)_G = \frac{27\,280 - 12\,800}{77.3} = 187 \text{ Brinell}$$

The AGMA contact-stress equations also are displayed side by side:

$$(\sigma_c)_P = C_p \left(W^t K_o K_v K_s \frac{K_m C_f}{d_P F I} \right)_P^{1/2} \quad (\sigma_c)_G = C_p \left(W^t K_o K_v K_s \frac{K_m C_f}{d_P F I} \right)_G^{1/2}$$

$$(S_H)_P = \left(\frac{S_c Z_N / (K_T K_R)}{\sigma_c} \right)_P \quad (S_H)_G = \left(\frac{S_c Z_N C_H / (K_T K_R)}{\sigma_c} \right)_G$$

Equating the factors of safety, substituting the stress relations, and canceling identical

terms including K_s gives, after solving for $(S_c)_G$,

$$(S_c)_G = (S_c)_P \frac{(Z_N)_P}{(Z_N)_G} \left(\frac{1}{C_H} \right)_G = (S_c)_P m_G^\beta \left(\frac{1}{C_H} \right)_G$$

where, as in the development of Eq. (14-44), $(Z_N)_P/(Z_N)_G = m_G^\beta$ and the value of β for wear comes from Fig. 14-15. Since C_H is so close to unity, it is usually neglected; therefore

$$(S_c)_G = (S_c)_P m_G^\beta \tag{14-45}$$

EXAMPLE 14-7 For $\beta = -0.056$ for a through-hardened steel, grade 1, continue Ex. 14-6 for wear.

Solution From Fig. 14-5,

$$(S_c)_P = 322(300) + 29\,100 = 125\,700 \text{ psi}$$

From Eq. (14-45),

$$(S_c)_G = (S_c)_P \left(\frac{64}{18} \right)^{-0.056} = 125\,700 \left(\frac{64}{18} \right)^{-0.056} = 117\,100 \text{ psi}$$

Answer

$$(H_B)_G = \frac{117\,100 - 29\,200}{322} = 273 \text{ Brinell}$$

which is slightly less than the pinion hardness of 300 Brinell.

Equations (14-44) and (14-45) apply as well to helical gears.

14-19 Design of a Gear Mesh

A useful decision set for spur and helical gears includes

- | | | |
|---|---|--------------------|
| <ul style="list-style-type: none"> • Function: load, speed, reliability, life, K_o • Unquantifiable risk: design factor n_d • Tooth system: ϕ, ψ, addendum, dedendum, root fillet radius • Gear ratio m_G, N_p, N_G • Quality number Q_v • Diametral pitch P_d | } | a priori decisions |
| <ul style="list-style-type: none"> • Face width F • Pinion material, core hardness, case hardness • Gear material, core hardness, case hardness | } | design decisions |

The first item to notice is the dimensionality of the decision set. There are four design decision categories, eight different decisions if you count them separately. This is a larger number than we have encountered before. It is important to use a design strategy that is convenient in either longhand execution or computer implementation. The design decisions have been placed in order of importance (impact on the amount of work to be redone in iterations). The steps are, after the a priori decisions have been made,

- Choose a diametral pitch.
- Examine implications on face width, pitch diameters, and material properties. If not satisfactory, return to pitch decision for change.
- Choose a pinion material and examine core and case hardness requirements. If not satisfactory, return to pitch decision and iterate until no decisions are changed.
- Choose a gear material and examine core and case hardness requirements. If not satisfactory, return to pitch decision and iterate until no decisions are changed.

With these plan steps in mind, we can consider them in more detail.

First select a trial diametral pitch.

Pinion bending:

- Select a median face width for this pitch, $4\pi/P$
- Find the range of necessary ultimate strengths
- Choose a material and a core hardness
- Find face width to meet factor of safety in bending
- Choose face width
- Check factor of safety in bending

Gear bending:

- Find necessary companion core hardness
- Choose a material and core hardness
- Check factor of safety in bending

Pinion wear:

- Find necessary S_c and attendant case hardness
- Choose a case hardness
- Check factor of safety in wear

Gear wear:

- Find companion case hardness
- Choose a case hardness
- Check factor of safety in wear

Completing this set of steps will yield a satisfactory design. Additional designs with diametral pitches adjacent to the first satisfactory design will produce several among which to choose. A figure of merit is necessary in order to choose the best. Unfortunately, a figure of merit in gear design is complex in an academic environment because material and processing cost vary. The possibility of using a process depends on the manufacturing facility if gears are made in house.

After examining Ex. 14–4 and Ex. 14–5 and seeing the wide range of factors of safety, one might entertain the notion of setting all factors of safety equal.⁹ In steel

⁹In designing gears it makes sense to define the factor of safety in wear as $(S)_H^2$ for uncrowned teeth, so that there is no mix-up. ANSI, in the preface to ANSI/AGMA 2001-D04 and 2101-D04, states “the use is completely voluntary. . . does not preclude anyone from using . . . procedures . . . not conforming to the standards.”

gears, wear is usually controlling and $(S_H)_P$ and $(S_H)_G$ can be brought close to equality. The use of softer cores can bring down $(S_F)_P$ and $(S_F)_G$, but there is value in keeping them higher. A tooth broken by bending fatigue not only can destroy the gear set, but can bend shafts, damage bearings, and produce inertial stresses up- and downstream in the power train, causing damage elsewhere if the gear box locks.

EXAMPLE 14-8

Design a 4:1 spur-gear reduction for a 100-hp, three-phase squirrel-cage induction motor running at 1120 rev/min. The load is smooth, providing a reliability of 0.95 at 10^9 revolutions of the pinion. Gearing space is meager. Use Nitralloy 135M, grade 1 material to keep the gear size small. The gears are heat-treated first then nitrided.

Solution Make the a priori decisions:

- Function: 100 hp, 1120 rev/min, $R = 0.95$, $N = 10^9$ cycles, $K_o = 1$
- Design factor for unquantifiable exigencies: $n_d = 2$
- Tooth system: $\phi_n = 20^\circ$
- Tooth count: $N_P = 18$ teeth, $N_G = 72$ teeth (no interference)
- Quality number: $Q_v = 6$, use grade 1 material
- Assume $m_B \geq 1.2$ in Eq. (14-40), $K_B = 1$

Pitch: Select a trial diametral pitch of $P_d = 4$ teeth/in. Thus, $d_P = 18/4 = 4.5$ in and $d_G = 72/4 = 18$ in. From Table 14-2, $Y_P = 0.309$, $Y_G = 0.4324$ (interpolated). From Fig. 14-6, $J_P = 0.32$, $J_G = 0.415$.

$$V = \frac{\pi d_P n_P}{12} = \frac{\pi(4.5)1120}{12} = 1319 \text{ ft/min}$$

$$W^t = \frac{33\,000H}{V} = \frac{33\,000(100)}{1319} = 2502 \text{ lbf}$$

From Eqs. (14-28) and (14-27),

$$B = 0.25(12 - Q_v)^{2/3} = 0.25(12 - 6)^{2/3} = 0.8255$$

$$A = 50 + 56(1 - 0.8255) = 59.77$$

$$K_v = \left(\frac{59.77 + \sqrt{1319}}{59.77} \right)^{0.8255} = 1.480$$

From Eq. (14-38), $K_R = 0.658 - 0.0759 \ln(1 - 0.95) = 0.885$. From Fig. 14-14,

$$(Y_N)_P = 1.3558(10^9)^{-0.0178} = 0.938$$

$$(Y_N)_G = 1.3558(10^9/4)^{-0.0178} = 0.961$$

From Fig. 14-15,

$$(Z_N)_P = 1.4488(10^9)^{-0.023} = 0.900$$

$$(Z_N)_G = 1.4488(10^9/4)^{-0.023} = 0.929$$

From the recommendation after Eq. (14–8), $3p \leq F \leq 5p$. Try $F = 4p = 4\pi/P = 4\pi/4 = 3.14$ in. From Eq. (a), Sec. 14–10,

$$K_s = 1.192 \left(\frac{F\sqrt{Y}}{P} \right)^{0.0535} = 1.192 \left(\frac{3.14\sqrt{0.309}}{4} \right)^{0.0535} = 1.140$$

From Eqs. (14–31), (14–33), (14–35), $C_{mc} = C_{pm} = C_e = 1$. From Fig. 14–11, $C_{ma} = 0.175$ for commercial enclosed gear units. From Eq. (14–32), $F/(10d_p) = 3.14/[10(4.5)] = 0.0698$. Thus,

$$C_{pf} = 0.0698 - 0.0375 + 0.0125(3.14) = 0.0715$$

From Eq. (14–30),

$$K_m = 1 + (1)[0.0715(1) + 0.175(1)] = 1.247$$

From Table 14–8, for steel gears, $C_p = 2300\sqrt{\text{psi}}$. From Eq. (14–23), with $m_G = 4$ and $m_N = 1$,

$$I = \frac{\cos 20^\circ \sin 20^\circ}{2} \frac{4}{4+1} = 0.1286$$

Pinion tooth bending. With the above estimates of K_s and K_m from the trial diametral pitch, we check to see if the mesh width F is controlled by bending or wear considerations. Equating Eqs. (14–15) and (14–17), substituting $n_d W^t$ for W^t , and solving for the face width $(F)_{\text{bend}}$ necessary to resist bending fatigue, we obtain

$$(F)_{\text{bend}} = n_d W^t K_o K_v K_s P_d \frac{K_m K_B}{J_P} \frac{K_T K_R}{S_t Y_N} \quad (1)$$

Equating Eqs. (14–16) and (14–18), substituting $n_d W^t$ for W^t , and solving for the face width $(F)_{\text{wear}}$ necessary to resist wear fatigue, we obtain

$$(F)_{\text{wear}} = \left(\frac{C_p Z_N}{S_c K_T K_R} \right)^2 n_d W^t K_o K_v K_s \frac{K_m C_f}{d_P I} \quad (2)$$

From Table 14–5 the hardness range of Nitralloy 135M is Rockwell C32–36 (302–335 Brinell). Choosing a midrange hardness as attainable, using 320 Brinell. From Fig. 14–4,

$$S_t = 86.2(320) + 12\,730 = 40\,310 \text{ psi}$$

Inserting the numerical value of S_t in Eq. (1) to estimate the face width gives

$$(F)_{\text{bend}} = 2(2502)(1)1.48(1.14)4 \frac{1.247(1)(1)0.885}{0.32(40\,310)0.938} = 3.08 \text{ in}$$

From Table 14–6 for Nitralloy 135M, $S_c = 170\,000$ psi. Inserting this in Eq. (2), we find

$$(F)_{\text{wear}} = \left(\frac{2300(0.900)}{170\,000(1)0.885} \right)^2 2(2502)1(1.48)1.14 \frac{1.247(1)}{4.5(0.1286)} = 3.44 \text{ in}$$

Decision Make face width 3.50 in. Correct K_s and K_m :

$$K_s = 1.192 \left(\frac{3.50\sqrt{0.309}}{4} \right)^{0.0535} = 1.147$$

$$\frac{F}{10d_p} = \frac{3.50}{10(4.5)} = 0.0778$$

$$C_{pf} = 0.0778 - 0.0375 + 0.0125(3.50) = 0.0841$$

$$K_m = 1 + (1)[0.0841(1) + 0.175(1)] = 1.259$$

The bending stress induced by W^t in bending, from Eq. (14–15), is

$$(\sigma)_P = 2502(1)1.48(1.147) \frac{4}{3.50} \frac{1.259(1)}{0.32} = 19\,100 \text{ psi}$$

The AGMA factor of safety in bending of the pinion, from Eq. (14–41), is

$$(S_F)_P = \frac{40\,310(0.938)/[1(0.885)]}{19\,100} = 2.24$$

Decision **Gear tooth bending.** Use cast gear blank because of the 18-in pitch diameter. Use the same material, heat treatment, and nitriding. The load-induced bending stress is in the ratio of J_P/J_G . Then

$$(\sigma)_G = 19\,100 \frac{0.32}{0.415} = 14\,730 \text{ psi}$$

The factor of safety of the gear in bending is

$$(S_F)_G = \frac{40\,310(0.961)/[1(0.885)]}{14\,730} = 2.97$$

Pinion tooth wear. The contact stress, given by Eq. (14–16), is

$$(\sigma_c)_P = 2300 \left[2502(1)1.48(1.147) \frac{1.259}{4.5(3.5)} \frac{1}{0.129} \right]^{1/2} = 118\,000 \text{ psi}$$

The factor of safety from Eq. (14–42), is

$$(S_H)_P = \frac{170\,000(0.900)/[1(0.885)]}{118\,000} = 1.465$$

By our definition of factor of safety, pinion bending is $(S_F)_P = 2.24$, and wear is $(S_H)_P^2 = (1.465)^2 = 2.15$.

Gear tooth wear. The hardness of the gear and pinion are the same. Thus, from Fig. 14–12, $C_H = 1$, the contact stress on the gear is the same as the pinion, $(\sigma_c)_G = 118\,000$ psi. The wear strength is also the same, $S_c = 170\,000$ psi. The factor of safety of the gear in wear is

$$(S_H)_G = \frac{170\,000(0.929)/[1(0.885)]}{118\,000} = 1.51$$

So, for the gear in bending, $(S_F)_G = 2.97$, and wear $(S_H)_G^2 = (1.51)^2 = 2.29$.

Rim. Keep $m_B \geq 1.2$. The whole depth is $h_t = \text{addendum} + \text{dedendum} = 1/P_d + 1.25/P_d = 2.25/P_d = 2.25/4 = 0.5625$ in. The rim thickness t_R is

$$t_R \geq m_B h_t = 1.2(0.5625) = 0.675 \text{ in}$$

In the design of the gear blank, be sure the rim thickness exceeds 0.675 in; if it does not, review and modify this mesh design.

This design example showed a satisfactory design for a four-pitch spur-gear mesh. Material could be changed, as could pitch. There are a number of other satisfactory designs, thus a figure of merit is needed to identify the best.

One can appreciate that gear design was one of the early applications of the digital computer to mechanical engineering. A design program should be interactive, presenting results of calculations, pausing for a decision by the designer, and showing the consequences of the decision, with a loop back to change a decision for the better. The program can be structured in totem-pole fashion, with the most influential decision at the top, then tumbling down, decision after decision, ending with the ability to change the current decision or to begin again. Such a program would make a fine class project. Troubleshooting the coding will reinforce your knowledge, adding flexibility as well as bells and whistles in subsequent terms.

Standard gears may not be the most economical design that meets the functional requirements, because no application is standard in all respects.¹⁰ Methods of designing custom gears are well-understood and frequently used in mobile equipment to provide good weight-to-performance index. The required calculations including optimizations are within the capability of a personal computer.

PROBLEMS

Because gearing problems can be difficult, the problems are presented by section.

Section 14-1

- 14-1** A steel spur pinion has a pitch of 6 teeth/in, 22 full-depth teeth, and a 20° pressure angle. The pinion runs at a speed of 1200 rev/min and transmits 15 hp to a 60-tooth gear. If the face width is 2 in, estimate the bending stress.
- 14-2** A steel spur pinion has a diametral pitch of 12 teeth/in, 16 teeth cut full-depth with a 20° pressure angle, and a face width of $\frac{3}{4}$ in. This pinion is expected to transmit 1.5 hp at a speed of 700 rev/min. Determine the bending stress.
- 14-3** A steel spur pinion has a module of 1.25 mm, 18 teeth cut on the 20° full-depth system, and a face width of 12 mm. At a speed of 1800 rev/min, this pinion is expected to carry a steady load of 0.5 kW. Determine the resulting bending stress.
- 14-4** A steel spur pinion has 15 teeth cut on the 20° full-depth system with a module of 5 mm and a face width of 60 mm. The pinion rotates at 200 rev/min and transmits 5 kW to the mating steel gear. What is the resulting bending stress?

¹⁰See H. W. Van Gerpen, C. K. Reece, and J. K. Jensen, *Computer Aided Design of Custom Gears*, Van Gerpen–Reece Engineering, Cedar Falls, Iowa, 1996.

- 14-5** A steel spur pinion has a module of 1 mm and 16 teeth cut on the 20° full-depth system and is to carry 0.15 kW at 400 rev/min. Determine a suitable face width based on an allowable bending stress of 150 MPa.
- 14-6** A 20° full-depth steel spur pinion has 17 teeth and a module of 1.5 mm and is to transmit 0.25 kW at a speed of 400 rev/min. Find an appropriate face width if the bending stress is not to exceed 75 MPa.
- 14-7** A 20° full-depth steel spur pinion has a diametral pitch of 5 teeth/in and 24 teeth and transmits 6 hp at a speed of 50 rev/min. Find an appropriate face width if the allowable bending stress is 20 kpsi.
- 14-8** A steel spur pinion is to transmit 15 hp at a speed of 600 rev/min. The pinion is cut on the 20° full-depth system and has a diametral pitch of 5 teeth/in and 16 teeth. Find a suitable face width based on an allowable stress of 10 kpsi.
- 14-9** A 20° full-depth steel spur pinion with 18 teeth is to transmit 2.5 hp at a speed of 600 rev/min. Determine appropriate values for the face width and diametral pitch based on an allowable bending stress of 10 kpsi.
- 14-10** A 20° full-depth steel spur pinion is to transmit 1.5 kW hp at a speed of 900 rev/min. If the pinion has 18 teeth, determine suitable values for the module and face width. The bending stress should not exceed 75 MPa.

Section 14-2

- 14-11** A speed reducer has 20° full-depth teeth and consists of a 22-tooth steel spur pinion driving a 60-tooth cast-iron gear. The horsepower transmitted is 15 at a pinion speed of 1200 rev/min. For a diametral pitch of 6 teeth/in and a face width of 2 in, find the contact stress.
- 14-12** A gear drive consists of a 16-tooth 20° steel spur pinion and a 48-tooth cast-iron gear having a pitch of 12 teeth/in. For a power input of 1.5 hp at a pinion speed of 700 rev/min, select a face width based on an allowable contact stress of 100 kpsi.
- 14-13** A gearset has a diametral pitch of 5 teeth/in, a 20° pressure angle, and a 24-tooth cast-iron spur pinion driving a 48-tooth cast-iron gear. The pinion is to rotate at 50 rev/min. What horsepower input can be used with this gearset if the contact stress is limited to 100 kpsi and $F = 2.5$ in?
- 14-14** A 20° 20-tooth cast-iron spur pinion having a module of 4 mm drives a 32-tooth cast-iron gear. Find the contact stress if the pinion speed is 1000 rev/min, the face width is 50 mm, and 10 kW of power is transmitted.
- 14-15** A steel spur pinion and gear have a diametral pitch of 12 teeth/in, milled teeth, 17 and 30 teeth, respectively, a 20° pressure angle, and a pinion speed of 525 rev/min. The tooth properties are $S_{ut} = 76$ kpsi, $S_y = 42$ kpsi and the Brinell hardness is 149. For a design factor of 2.25, a face width of $\frac{7}{8}$ in, what is the power rating of the gearset?
- 14-16** A milled-teeth steel pinion and gear pair have $S_{ut} = 113$ kpsi, $S_y = 86$ kpsi and a hardness at the involute surface of 262 Brinell. The diametral pitch is 3 teeth/in, the face width is 2.5 in, and the pinion speed is 870 rev/min. The tooth counts are 20 and 100. For a design factor of 1.5, rate the gearset for power considering both bending and wear.
- 14-17** A 20° full-depth steel spur pinion rotates at 1145 rev/min. It has a module of 6 mm, a face width of 75 mm, and 16 milled teeth. The ultimate tensile strength at the involute is 900 MPa exhibiting a Brinell hardness of 260. The gear is steel with 30 teeth and has identical material strengths. For a design factor of 1.3 find the power rating of the gearset based on the pinion and the gear resisting bending and wear fatigue.

- 14-18** A steel spur pinion has a pitch of 6 teeth/in, 17 full-depth milled teeth, and a pressure angle of 20° . The pinion has an ultimate tensile strength at the involute surface of 116 kpsi, a Brinell hardness of 232, and a yield strength of 90 kpsi. Its shaft speed is 1120 rev/min, its face width is 2 in, and its mating gear has 51 teeth. Rate the pinion for power transmission if the design factor is 2.
- Pinion bending fatigue imposes what power limitation?
 - Pinion surface fatigue imposes what power limitation? The gear has identical strengths to the pinion with regard to material properties.
 - Consider power limitations due to gear bending and wear.
 - Rate the gearset.

Section 14-3 to 14-19

- 14-19** A commercial enclosed gear drive consists of a 20° spur pinion having 16 teeth driving a 48-tooth gear. The pinion speed is 300 rev/min, the face width 2 in, and the diametral pitch 6 teeth/in. The gears are grade 1 steel, through-hardened at 200 Brinell, made to No. 6 quality standards, uncrowned, and are to be accurately and rigidly mounted. Assume a pinion life of 10^8 cycles and a reliability of 0.90. Determine the AGMA bending and contact stresses and the corresponding factors of safety if 5 hp is to be transmitted.
- 14-20** A 20° spur pinion with 20 teeth and a module of 2.5 mm transmits 120 W to a 36-tooth gear. The pinion speed is 100 rev/min, and the gears are grade 1, 18 mm face width, through-hardened steel at 200 Brinell, uncrowned, manufactured to a No. 6 quality standard, and considered to be of open gearing quality installation. Find the AGMA bending and contact stresses and the corresponding factors of safety for a pinion life of 10^8 cycles and a reliability of 0.95.
- 14-21** Repeat Prob. 14-19 using helical gears each with a 20° normal pitch angle and a helix angle of 30° and a normal diametral pitch of 6 teeth/in.
- 14-22** A spur gearset has 17 teeth on the pinion and 51 teeth on the gear. The pressure angle is 20° and the overload factor $K_o = 1$. The diametral pitch is 6 teeth/in and the face width is 2 in. The pinion speed is 1120 rev/min and its cycle life is to be 10^8 revolutions at a reliability $R = 0.99$. The quality number is 5. The material is a through-hardened steel, grade 1, with Brinell hardnesses of 232 core and case of both gears. For a design factor of 2, rate the gearset for these conditions using the AGMA method.
- 14-23** In Sec. 14-10, Eq. (a) is given for K_s based on the procedure in Ex. 14-2. Derive this equation.
- 14-24** A speed-reducer has 20° full-depth teeth, and the single-reduction spur-gear gearset has 22 and 60 teeth. The diametral pitch is 4 teeth/in and the face width is $3\frac{1}{4}$ in. The pinion shaft speed is 1145 rev/min. The life goal of 5-year 24-hour-per-day service is about $3(10^9)$ pinion revolutions. The absolute value of the pitch variation is such that the transmission accuracy level number is 6. The materials are 4340 through-hardened grade 1 steels, heat-treated to 250 Brinell, core and case, both gears. The load is moderate shock and the power is smooth. For a reliability of 0.99, rate the speed reducer for power.
- 14-25** The speed reducer of Prob. 14-24 is to be used for an application requiring 40 hp at 1145 rev/min. Estimate the stresses of pinion bending, gear bending, pinion wear, and gear wear and the attendant AGMA factors of safety $(S_F)_P$, $(S_F)_G$, $(S_H)_P$, and $(S_H)_G$. For the reducer, what is the factor of safety for unquantifiable exigencies in W^t ? What mode of failure is the most threatening?
- 14-26** The gearset of Prob. 14-24 needs improvement of wear capacity. Toward this end the gears are nitrided so that the grade 1 materials have hardnesses as follows: The pinion core is 250 and the

pinion case hardness is 390 Brinell, and the gear core hardness is 250 core and 390 case. Estimate the power rating for the new gearset.

14-27 The gearset of Prob. 14-24 has had its gear specification changed to 9310 for carburizing and surface hardening with the result that the pinion Brinell hardnesses are 285 core and 580–600 case, and the gear hardnesses are 285 core and 580–600 case. Estimate the power rating for the new gearset.

14-28 The gearset of Prob. 14-27 is going to be upgraded in material to a quality of grade 2 9310 steel. Estimate the power rating for the new gearset.

14-29 Matters of scale always improve insight and perspective. Reduce the physical size of the gearset in Prob. 14-24 by one-half and note the result on the estimates of transmitted load W' and power.

14-30 AGMA procedures with cast-iron gear pairs differ from those with steels because life predictions are difficult; consequently $(Y_N)_P$, $(Y_N)_G$, $(Z_N)_P$, and $(Z_N)_G$ are set to unity. The consequence of this is that the fatigue strengths of the pinion and gear materials are the same. The reliability is 0.99 and the life is 10^7 revolution of the pinion ($K_R = 1$). For longer lives the reducer is derated in power. For the pinion and gear set of Prob. 14-24, use grade 40 cast iron for both gears ($H_B = 201$ Brinell). Rate the reducer for power with S_F and S_H equal to unity.

14-31 Spur-gear teeth have rolling and slipping contact (often about 8 percent slip). Spur gears tested to wear failure are reported at 10^8 cycles as Buckingham's surface fatigue load-stress factor K . This factor is related to Hertzian contact strength S_C by

$$S_C = \sqrt{\frac{1.4K}{(1/E_1 + 1/E_2) \sin \phi}}$$

where ϕ is the normal pressure angle. Cast iron grade 20 gears with $\phi = 14\frac{1}{2}^\circ$ and 20° pressure angle exhibit a minimum K of 81 and 112 psi, respectively. How does this compare with $S_C = 0.32H_B$ kpsi?

14-32 You've probably noticed that although the AGMA method is based on two equations, the details of assembling all the factors is computationally intensive. To reduce error and omissions, a computer program would be useful. Write a program to perform a power rating of an existing gearset, then use Prob. 14-24, 14-26, 14-27, 14-28, and 14-29 to test your program by comparing the results to your longhand solutions.

14-33 In Ex. 14-5 use nitrided grade 1 steel (4140) which produces Brinell hardnesses of 250 core and 500 at the surface (case). Use the upper fatigue curves on Figs. 14-14 and 14-15. Estimate the power capacity of the mesh with factors of safety of $S_F = S_H = 1$.

14-34 In Ex. 14-5 use carburized and case-hardened gears of grade 1. Carburizing and case-hardening can produce a 550 Brinell case. The core hardnesses are 200 Brinell. Estimate the power capacity of the mesh with factors of safety of $S_F = S_H = 1$, using the lower fatigue curves in Figs. 14-14 and 14-15.

14-35 In Ex. 14-5, use carburized and case-hardened gears of grade 2 steel. The core hardnesses are 200, and surface hardnesses are 600 Brinell. Use the lower fatigue curves of Figs. 14-14 and 14-15. Estimate the power capacity of the mesh using $S_F = S_H = 1$. Compare the power capacity with the results of Prob. 14-34.

15

Bevel and Worm Gears

Chapter Outline

- 15-1** Bevel Gearing—General **766**
- 15-2** Bevel-Gear Stresses and Strengths **768**
- 15-3** AGMA Equation Factors **771**
- 15-4** Straight-Bevel Gear Analysis **783**
- 15-5** Design of a Straight-Bevel Gear Mesh **786**
- 15-6** Worm Gearing—AGMA Equation **789**
- 15-7** Worm-Gear Analysis **793**
- 15-8** Designing a Worm-Gear Mesh **797**
- 15-9** Buckingham Wear Load **800**

The American Gear Manufacturers Association (AGMA) has established standards for the analysis and design of the various kinds of bevel and worm gears. Chapter 14 was an introduction to the AGMA methods for spur and helical gears. AGMA has established similar methods for other types of gearing, which all follow the same general approach.

15-1 Bevel Gearing—General

Bevel gears may be classified as follows:

- Straight bevel gears
- Spiral bevel gears
- Zerol bevel gears
- Hypoid gears
- Spiroid gears

A straight bevel gear was illustrated in Fig. 13–35. These gears are usually used for pitch-line velocities up to 1000 ft/min (5 m/s) when the noise level is not an important consideration. They are available in many stock sizes and are less expensive to produce than other bevel gears, especially in small quantities.

A *spiral bevel gear* is shown in Fig. 15–1; the definition of the *spiral angle* is illustrated in Fig. 15–2. These gears are recommended for higher speeds and where the noise level is an important consideration. Spiral bevel gears are the bevel counterpart of the helical gear; it can be seen in Fig. 15–1 that the pitch surfaces and the nature of contact are the same as for straight bevel gears except for the differences brought about by the spiral-shaped teeth.

The *Zerol bevel gear* is a patented gear having curved teeth but with a zero spiral angle. The axial thrust loads permissible for Zerol bevel gears are not as large as those for the spiral bevel gear, and so they are often used instead of straight bevel gears. The Zerol bevel gear is generated by the same tool used for regular spiral bevel gears. For design purposes, use the same procedure as for straight bevel gears and then simply substitute a Zerol bevel gear.

Figure 15-1

Spiral bevel gears. (Courtesy of Gleason Works, Rochester, N.Y.)


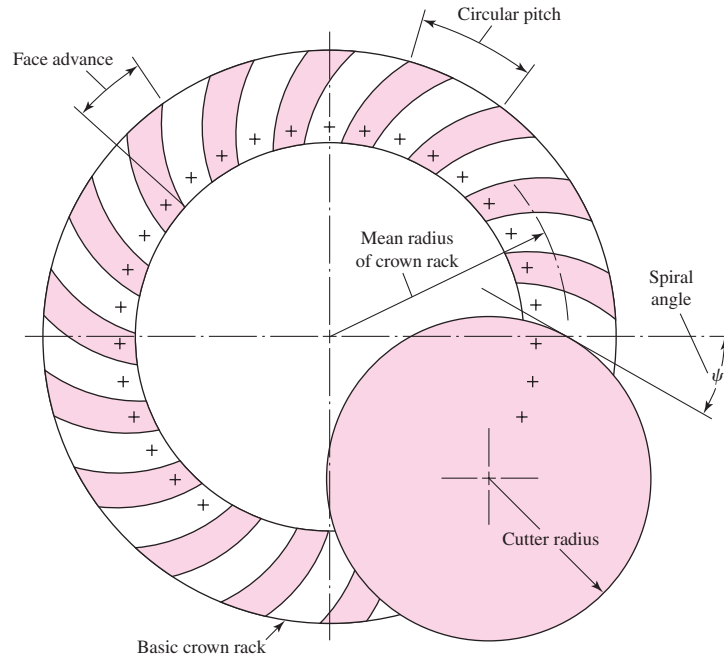



Figure 15-2

Cutting spiral-gear teeth on the basic crown rack.

**Figure 15-3**

Hypoid gears. (Courtesy of
Gleason Works, Rochester,
N.Y.)

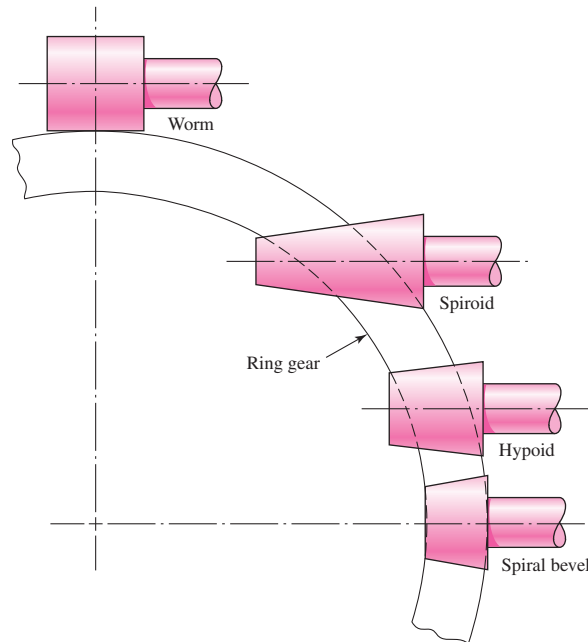


It is frequently desirable, as in the case of automotive differential applications, to have gearing similar to bevel gears but with the shafts offset. Such gears are called *hypoid gears*, because their pitch surfaces are hyperboloids of revolution. The tooth action between such gears is a combination of rolling and sliding along a straight line and has much in common with that of worm gears. Figure 15-3 shows a pair of hypoid gears in mesh.

Figure 15-4 is included to assist in the classification of spiral bevel gearing. It is seen that the hypoid gear has a relatively small shaft offset. For larger offsets, the pinion begins to resemble a tapered worm and the set is then called *spiroid gearing*.

Figure 15-4

Comparison of intersecting- and offset-shaft bevel-type gearings. (From Gear Handbook by Darle W. Dudley, 1962, p. 2–24.)



15-2 Bevel-Gear Stresses and Strengths

In a typical bevel-gear mounting, Fig. 13–36, for example, one of the gears is often mounted outboard of the bearings. This means that the shaft deflections can be more pronounced and can have a greater effect on the nature of the tooth contact. Another difficulty that occurs in predicting the stress in bevel-gear teeth is the fact that the teeth are tapered. Thus, to achieve perfect line contact passing through the cone center, the teeth ought to bend more at the large end than at the small end. To obtain this condition requires that the load be proportionately greater at the large end. Because of this varying load across the face of the tooth, it is desirable to have a fairly short face width.

Because of the complexity of bevel, spiral bevel, Zerol bevel, hypoid, and spiroid gears, as well as the limitations of space, only a portion of the applicable standards that refer to straight-bevel gears is presented here.¹ Table 15–1 gives the symbols used in ANSI/AGMA 2003-B97.

Fundamental Contact Stress Equation

$$s_c = \sigma_c = C_p \left(\frac{W^t}{F d_p I} K_o K_v K_m C_s C_{xc} \right)^{1/2} \quad (\text{U.S. customary units})$$

$$\sigma_H = Z_E \left(\frac{1000 W^t}{b d Z_1} K_A K_v K_{H\beta} Z_x Z_{xc} \right)^{1/2} \quad (\text{SI units}) \quad (15-1)$$

The first term in each equation is the AGMA symbol, whereas; σ_c , our normal notation, is directly equivalent.

¹Figures 15–5 to 15–13 and Tables 15–1 to 15–7 have been extracted from ANSI/AGMA 2003-B97, *Rating the Pitting Resistance and Bending Strength of Generated Straight Bevel, Zerol Bevel and Spiral Bevel Gear Teeth* with the permission of the publisher, the American Gear Manufacturers Association, 500 Montgomery Street, Suite 350, Alexandria, VA, 22314-1560

Table 15-1

Symbols Used in Bevel Gear Rating Equations, ANSI/AGMA 2003-B97 Standard Source: ANSI/AGMA 2003-B97.

AGMA Symbol	ISO Symbol	Description	Units
A_m	R_m	Mean cone distance	in (mm)
A_o	R_e	Outer cone distance	in (mm)
C_H	Z_{VV}	Hardness ratio factor for pitting resistance	
C_i	Z_i	Inertia factor for pitting resistance	
C_L	Z_{NT}	Stress cycle factor for pitting resistance	
C_p	Z_E	Elastic coefficient	$[\text{lb}/\text{in}^2]^{0.5}$ $([\text{N}/\text{mm}^2]^{0.5})$
C_R	Z_Z	Reliability factor for pitting	
C_{SF}		Service factor for pitting resistance	
C_S	Z_x	Size factor for pitting resistance	
C_{xc}	Z_{xc}	Crowning factor for pitting resistance	
D, d	d_{e2}, d_{e1}	Outer pitch diameters of gear and pinion, respectively	in (mm)
E_G, E_P	E_2, E_1	Young's modulus of elasticity for materials of gear and pinion, respectively	lb/in^2 (N/mm^2)
e	e	Base of natural (Napierian) logarithms	
F	b	Net face width	in (mm)
F_{eG}, F_{eP}	b'_2, b'_1	Effective face widths of gear and pinion, respectively	in (mm)
f_p	R_{a1}	Pinion surface roughness	μin (μm)
H_{BG}	H_{B2}	Minimum Brinell hardness number for gear material	HB
H_{BP}	H_{B1}	Minimum Brinell hardness number for pinion material	HB
h_c	$E_{ht \min}$	Minimum total case depth at tooth middepth	in (mm)
h_e	h'_c	Minimum effective case depth	in (mm)
$h_{e \lim}$	$h'_{c \lim}$	Suggested maximum effective case depth limit at tooth middepth	in (mm)
I	Z_I	Geometry factor for pitting resistance	
J	Y_J	Geometry factor for bending strength	
J_G, J_P	Y_{J2}, Y_{J1}	Geometry factor for bending strength for gear and pinion, respectively	
K_F	Y_F	Stress correction and concentration factor	
K_i	Y_i	Inertia factor for bending strength	
K_L	Y_{NT}	Stress cycle factor for bending strength	
K_m	$K_{H\beta}$	Load distribution factor	
K_o	K_A	Overload factor	
K_R	Y_z	Reliability factor for bending strength	
K_S	Y_X	Size factor for bending strength	
K_{SF}		Service factor for bending strength	
K_T	K_θ	Temperature factor	
K_v	K_v	Dynamic factor	
K_x	Y_β	Lengthwise curvature factor for bending strength	
	m_{et}	Outer transverse module	(mm)
	m_{mt}	Mean transverse module	(mm)
	m_{mn}	Mean normal module	(mm)
m_{NI}	ϵ_{NI}	Load sharing ratio, pitting	
m_{NJ}	ϵ_{NJ}	Load sharing ratio, bending	
N	z_2	Number of gear teeth	
N_L	n_L	Number of load cycles	
n	z_1	Number of pinion teeth	
n_P	n_1	Pinion speed	rev/min

(Continued)

Table 15-1

Symbols Used in Gear Rating Equations, ANSI/AGMA 2003-B97 Standard (Continued)

AGMA Symbol	ISO Symbol	Description	Units
P	P	Design power through gear pair	hp (kW)
P_a	P_a	Allowable transmitted power	hp (kW)
P_{ac}	P_{az}	Allowable transmitted power for pitting resistance	hp (kW)
P_{acu}	P_{azu}	Allowable transmitted power for pitting resistance at unity service factor	hp (kW)
P_{at}	P_{ay}	Allowable transmitted power for bending strength	hp (kW)
P_{atu}	P_{ayu}	Allowable transmitted power for bending strength at unity service factor	hp (kW)
P_d		Outer transverse diametral pitch	in^{-1}
P_m		Mean transverse diametral pitch	in^{-1}
P_{mn}		Mean normal diametral pitch	in^{-1}
Q_v	Q_v	Transmission accuracy number	
q	q	Exponent used in formula for lengthwise curvature factor	
R, r	r_{mpt2}, r_{mpt1}	Mean transverse pitch radii for gear and pinion, respectively	in (mm)
R_t, r_t	$r_{m\gamma o2}, r_{m\gamma o1}$	Mean transverse radii to point of load application for gear and pinion, respectively	in (mm)
r_c	r_{c0}	Cutter radius used for producing Zerol bevel and spiral bevel gears	in (mm)
s	g_c	Length of the instantaneous line of contact between mating tooth surfaces	in (mm)
s_{ac}	$\sigma_{H \text{ lim}}$	Allowable contact stress number	lbf/in^2 (N/mm^2)
s_{at}	$\sigma_{F \text{ lim}}$	Bending stress number (allowable)	lbf/in^2 (N/mm^2)
s_c	σ_H	Calculated contact stress number	lbf/in^2 (N/mm^2)
S_F	S_F	Bending safety factor	
S_H	S_H	Contact safety factor	
s_t	σ_F	Calculated bending stress number	lbf/in^2 (N/mm^2)
s_{wc}	σ_{HP}	Permissible contact stress number	lbf/in^2 (N/mm^2)
s_{wt}	σ_{FP}	Permissible bending stress number	lbf/in^2 (N/mm^2)
T_P	T_1	Operating pinion torque	lbf in (Nm)
T_T	θ_T	Operating gear blank temperature	$^{\circ}\text{F}(^{\circ}\text{C})$
t_o	s_{ai}	Normal tooth top land thickness at narrowest point	in (mm)
U_c	U_c	Core hardness coefficient for nitrided gear	lbf/in^2 (N/mm^2)
U_H	U_H	Hardening process factor for steel	lbf/in^2 (N/mm^2)
v_t	v_{et}	Pitch-line velocity at outer pitch circle	ft/min (m/s)
Y_{KG}, Y_{KP}	Y_{K2}, Y_{K1}	Tooth form factors including stress-concentration factor for gear and pinion, respectively	
μ_G, μ_P	ν_2, ν_1	Poisson's ratio for materials of gear and pinion, respectively	
ρ_o	$\rho_{\gamma o}$	Relative radius of profile curvature at point of maximum contact stress between mating tooth surfaces	in (mm)
ϕ	α_n	Normal pressure angle at pitch surface	
ϕ_t	α_{wt}	Transverse pressure angle at pitch point	
ψ	β_m	Mean spiral angle at pitch surface	
ψ_b	β_{mb}	Mean base spiral angle	

Permissible Contact Stress Number (Strength) Equation

$$s_{wc} = (\sigma_c)_{\text{all}} = \frac{s_{ac} C_L C_H}{S_H K_T C_R} \quad (\text{U.S. customary units})$$

$$\sigma_{HP} = \frac{\sigma_{H \text{ lim}} Z_{NT} Z_W}{S_H K_\theta Z_Z} \quad (\text{SI units})$$
(15-2)

Bending Stress

$$s_t = \frac{W^t}{F} P_d K_o K_v \frac{K_s K_m}{K_x J} \quad (\text{U.S. customary units})$$

$$\sigma_F = \frac{1000 W^t}{b} \frac{K_A K_v}{m_{et}} \frac{Y_x K_{H\beta}}{Y_\beta Y_J} \quad (\text{SI units})$$
(15-3)

Permissible Bending Stress Equation

$$s_{wt} = \frac{s_{at} K_L}{S_F K_T K_R} \quad (\text{U.S. customary units})$$

$$\sigma_{FP} = \frac{\sigma_{F \text{ lim}} Y_{NT}}{S_F K_\theta Y_z} \quad (\text{SI units})$$
(15-4)

15-3 AGMA Equation Factors**Overload Factor K_o (K_A)**

The overload factor makes allowance for any externally applied loads in excess of the nominal transmitted load. Table 15-2, from Appendix A of 2003-B97, is included for your guidance.

Safety Factors S_H and S_F

The factors of safety S_H and S_F as defined in 2003-B97 are adjustments to strength, not load, and consequently cannot be used as is to assess (by comparison) whether the threat is from wear fatigue or bending fatigue. Since W^t is the same for the pinion and gear, the comparison of $\sqrt{S_H}$ to S_F allows direct comparison.

Dynamic Factor K_v

In 2003-C87 AGMA changed the definition of K_v to its reciprocal but used the same symbol. Other standards have yet to follow this move. The dynamic factor K_v makes

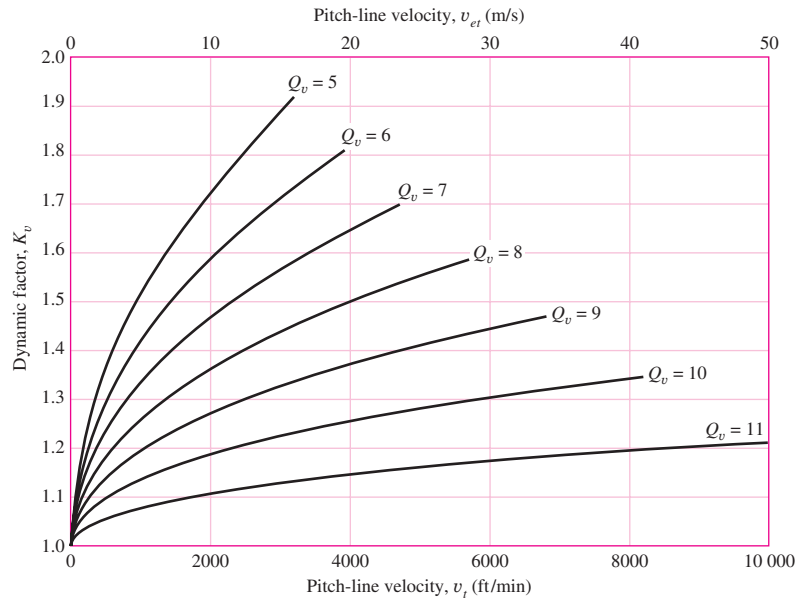
Table 15-2Overload Factors K_o (K_A)Source: ANSI/AGMA
2003-B97.

Character of Prime Mover	Character of Load on Driven Machine			
	Uniform	Light Shock	Medium Shock	Heavy Shock
Uniform	1.00	1.25	1.50	1.75 or higher
Light shock	1.10	1.35	1.60	1.85 or higher
Medium shock	1.25	1.50	1.75	2.00 or higher
Heavy shock	1.50	1.75	2.00	2.25 or higher

Note: This table is for speed-decreasing drives. For speed-increasing drives, add $0.01(N/n)^2$ or $0.01(z_2/z_1)^2$ to the above factors.

Figure 15-5

Dynamic factor K_v .
(Source: ANSI/AGMA 2003-
B97.)



allowance for the effect of gear-tooth quality related to speed and load, and the increase in stress that follows. AGMA uses a *transmission accuracy number* Q_v to describe the precision with which tooth profiles are spaced along the pitch circle. Figure 15–5 shows graphically how pitch-line velocity and transmission accuracy number are related to the dynamic factor K_v . Curve fits are

$$K_v = \left(\frac{A + \sqrt{v_t}}{A} \right)^B \quad (\text{U.S. customary units}) \quad (15-5)$$

$$K_v = \left(\frac{A + \sqrt{200v_{et}}}{A} \right)^B \quad (\text{SI units})$$

where

$$A = 50 + 56(1 - B) \quad (15-6)$$

$$B = 0.25(12 - Q_v)^{2/3}$$

and v_t (v_{et}) is the pitch-line velocity at outside pitch diameter, expressed in ft/min (m/s):

$$v_t = \pi d_P n_P / 12 \quad (\text{U.S. customary units}) \quad (15-7)$$

$$v_{et} = 5.236(10^{-5})d_1 n_1 \quad (\text{SI units})$$

The maximum recommended pitch-line velocity is associated with the abscissa of the terminal points of the curve in Fig. 15–5:

$$v_{t \max} = [A + (Q_v - 3)]^2 \quad (\text{U.S. customary units}) \quad (15-8)$$

$$v_{te \max} = \frac{[A + (Q_v - 3)]^2}{200} \quad (\text{SI units})$$

where $v_{t \max}$ and $v_{te \max}$ are in ft/min and m/s, respectively.

Size Factor for Pitting Resistance C_s (Z_x)

$$C_s = \begin{cases} 0.5 & F < 0.5 \text{ in} \\ 0.125F + 0.4375 & 0.5 \leq F \leq 4.5 \text{ in} \\ 1 & F > 4.5 \text{ in} \end{cases} \quad \text{(U.S. customary units)} \quad (15-9)$$

$$Z_x = \begin{cases} 0.5 & b < 12.7 \text{ mm} \\ 0.00492b + 0.4375 & 12.7 \leq b \leq 114.3 \text{ mm} \\ 1 & b > 114.3 \text{ mm} \end{cases} \quad \text{(SI units)}$$

Size Factor for Bending K_s (Y_x)

$$K_s = \begin{cases} 0.4867 + 0.2132/P_d & 0.5 \leq P_d \leq 16 \text{ in}^{-1} \\ 0.5 & P_d > 16 \text{ in}^{-1} \end{cases} \quad \text{(U.S. customary units)}$$

$$Y_x = \begin{cases} 0.5 & m_{et} < 1.6 \text{ mm} \\ 0.4867 + 0.008339m_{et} & 1.6 \leq m_{et} \leq 50 \text{ mm} \end{cases} \quad \text{(SI units)} \quad (15-10)$$

Load-Distribution Factor K_m ($K_{H\beta}$)

$$K_m = K_{mb} + 0.0036F^2 \quad \text{(U.S. customary units)} \quad (15-11)$$

$$K_{H\beta} = K_{mb} + 5.6(10^{-6})b^2 \quad \text{(SI units)}$$

where

$$K_{mb} = \begin{cases} 1.00 & \text{both members straddle-mounted} \\ 1.10 & \text{one member straddle-mounted} \\ 1.25 & \text{neither member straddle-mounted} \end{cases}$$

Crowning Factor for Pitting C_{xc} (Z_{xc})

The teeth of most bevel gears are crowned in the lengthwise direction during manufacture to accommodate to the deflection of the mountings.

$$C_{xc} = Z_{xc} = \begin{cases} 1.5 & \text{properly crowned teeth} \\ 2.0 & \text{or larger uncrowned teeth} \end{cases} \quad (15-12)$$

Lengthwise Curvature Factor for Bending Strength K_x (Y_β)

For straight-bevel gears,

$$K_x = Y_\beta = 1 \quad (15-13)$$

Pitting Resistance Geometry Factor I (Z_I)

Figure 15–6 shows the geometry factor I (Z_I) for straight-bevel gears with a 20° pressure angle and 90° shaft angle. Enter the figure ordinate with the number of pinion teeth, move to the number of gear-teeth contour, and read from the abscissa.

Bending Strength Geometry Factor J (Y_J)

Figure 15–7 shows the geometry factor J for straight-bevel gears with a 20° pressure angle and 90° shaft angle.

Figure 15-6

Contact geometry factor $I(Z)$ for coniflex straight-bevel gears with a 20° normal pressure angle and a 90° shaft angle. (Source: ANSI/AGMA 2003-B97.)

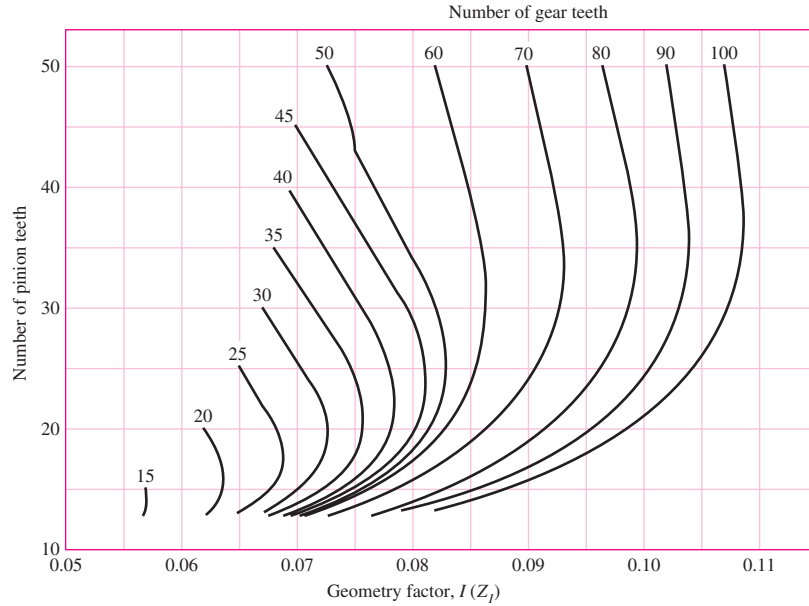
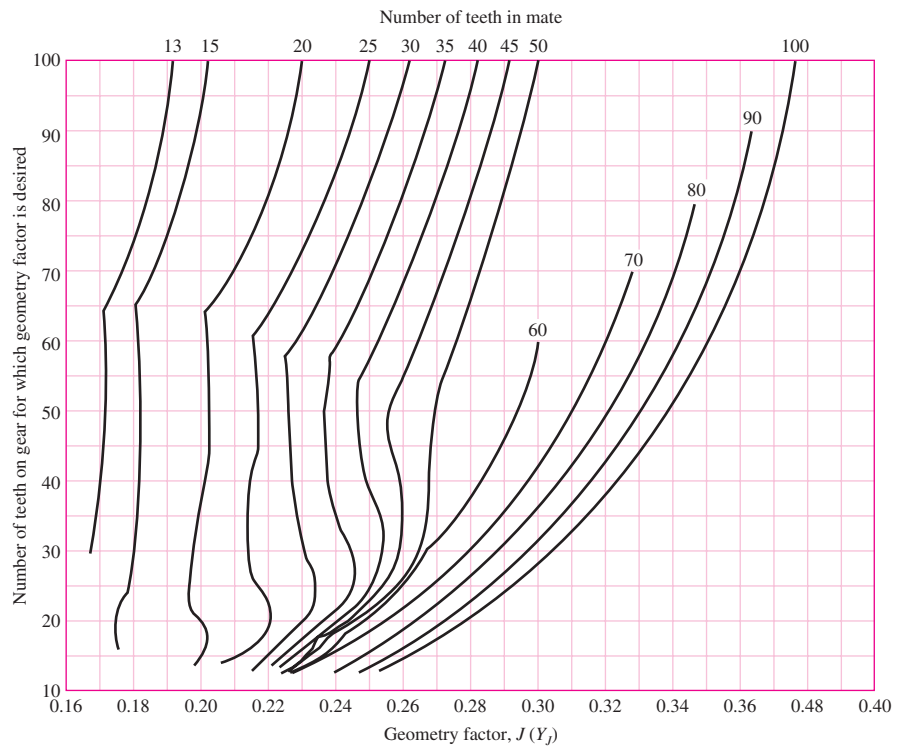


Figure 15-7

Bending factor $J(Y_j)$ for coniflex straight-bevel gears with a 20° normal pressure angle and 90° shaft angle. (Source: ANSI/AGMA 2003-B97.)



Stress-Cycle Factor for Pitting Resistance C_L (Z_{NT})

$$C_L = \begin{cases} 2 & 10^3 \leq N_L < 10^4 \\ 3.4822N_L^{-0.0602} & 10^4 \leq N_L \leq 10^{10} \end{cases} \quad (15-14)$$

$$Z_{NT} = \begin{cases} 2 & 10^3 \leq n_L < 10^4 \\ 3.4822n_L^{-0.0602} & 10^4 \leq n_L \leq 10^{10} \end{cases}$$

See Fig. 15–8 for a graphical presentation of Eqs. (15–14).

Stress-Cycle Factor for Bending Strength K_L (Y_{NT})

$$K_L = \begin{cases} 2.7 & 10^2 \leq N_L < 10^3 \\ 6.1514N_L^{-0.1182} & 10^3 \leq N_L < 3(10^6) \\ 1.6831N_L^{-0.0323} & 3(10^6) \leq N_L \leq 10^{10} \\ 1.3558N_L^{-0.0178} & 3(10^6) \leq N_L \leq 10^{10} \end{cases} \quad \begin{array}{l} \text{general} \\ \text{critical} \end{array} \quad (15-15)$$

$$Y_{NT} = \begin{cases} 2.7 & 10^2 \leq n_L < 10^3 \\ 6.1514n_L^{-0.1182} & 10^3 \leq n_L < 3(10^6) \\ 1.6831n_L^{-0.0323} & 3(10^6) \leq n_L \leq 10^{10} \\ 1.3558n_L^{-0.0323} & 3(10^6) \leq n_L \leq 10^{10} \end{cases} \quad \begin{array}{l} \text{general} \\ \text{critical} \end{array}$$

See Fig. 15–9 for a plot of Eqs. (15–15).

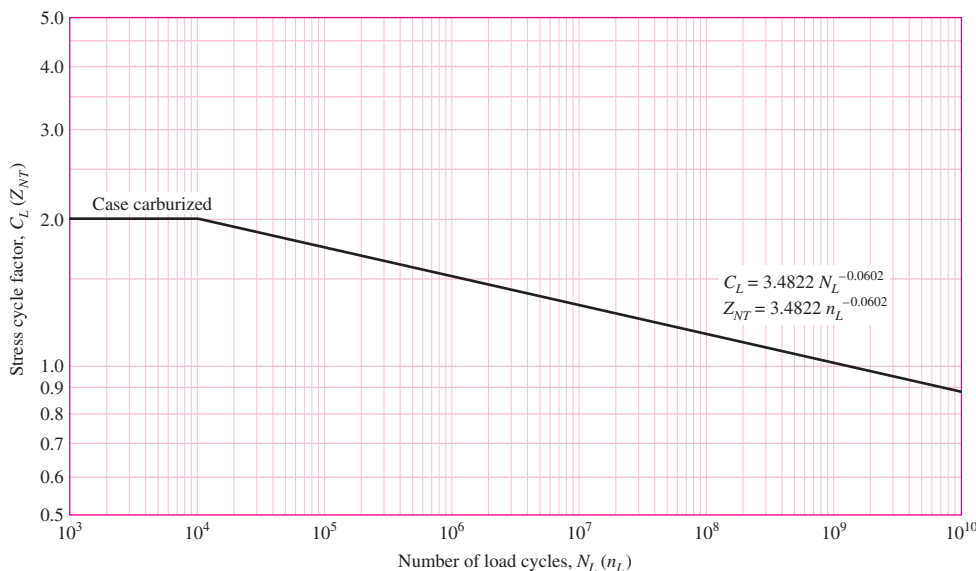


Figure 15–8

Contact stress cycle factor for pitting resistance C_L (Z_{NT}) for carburized case-hardened steel bevel gears.
(Source: ANSI/AGMA 2003-B97.)

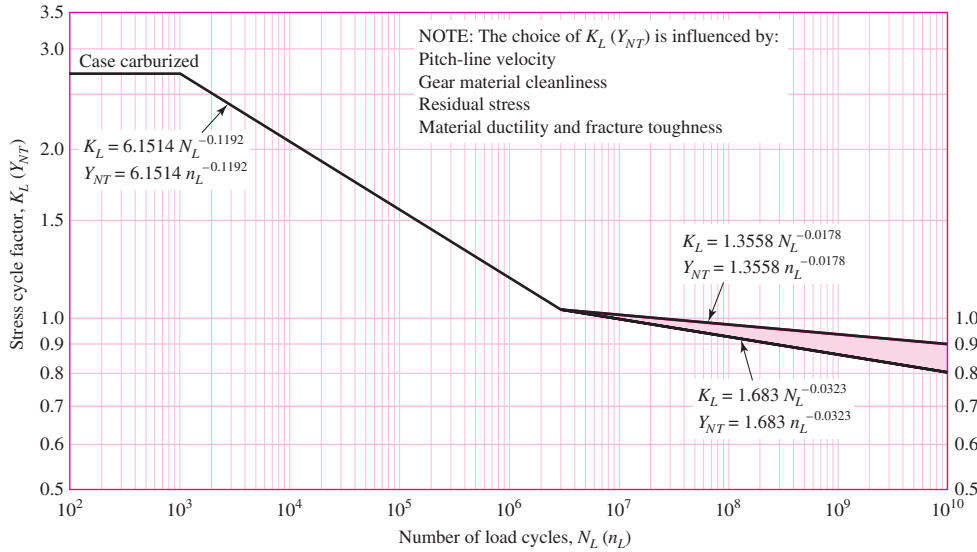


Figure 15-9

Stress cycle factor for bending strength K_L (Y_{NT}) for carburized case-hardened steel bevel gears.
(Source: ANSI/AGMA 2003-B97.)

Hardness-Ratio Factor C_H (Z_W)

$$C_H = 1 + B_1(N/n - 1) \quad B_1 = 0.00898(H_{BP}/H_{BG}) - 0.00829 \quad (15-16)$$

$$Z_W = 1 + B_1(z_1/z_2 - 1) \quad B_1 = 0.00898(H_{B1}/H_{B2}) - 0.00829$$

The preceding equations are valid when $1.2 \leq H_{BP}/H_{BG} \leq 1.7$ ($1.2 \leq H_{B1}/H_{B2} \leq 1.7$). Figure 15-10 graphically displays Eqs. (15-16). When a surface-hardened pinion (48 HRC or harder) is run with a through-hardened gear ($180 \leq H_B \leq 400$), a work-hardening effect occurs. The C_H (Z_W) factor varies with pinion surface roughness f_P (R_{a1}) and the mating-gear hardness:

$$C_H = 1 + B_2(450 - H_{BG}) \quad B_2 = 0.00075 \exp(-0.0122f_P) \quad (15-17)$$

$$Z_W = 1 + B_2(450 - H_{B2}) \quad B_2 = 0.00075 \exp(-0.52f_P)$$

where f_P (R_{a1}) = pinion surface hardness μin (μm)

H_{BG} (H_{B2}) = minimum Brinell hardness

See Fig. 15-11 for carburized steel gear pairs of approximately equal hardness $C_H = Z_W = 1$.

Temperature Factor K_T (K_θ)

$$K_T = \begin{cases} 1 & 32^\circ\text{F} \leq t \leq 250^\circ\text{F} \\ (460 + t)/710 & t > 250^\circ\text{F} \end{cases} \quad (15-18)$$

$$K_\theta = \begin{cases} 1 & 0^\circ\text{C} \leq \theta \leq 120^\circ\text{C} \\ (273 + \theta)/393 & \theta > 120^\circ\text{C} \end{cases}$$

Figure 15-10

Hardness-ratio factor $C_H(Z_W)$ for through-hardened pinion and gear.
(Source: ANSI/AGMA 2003-B97.)

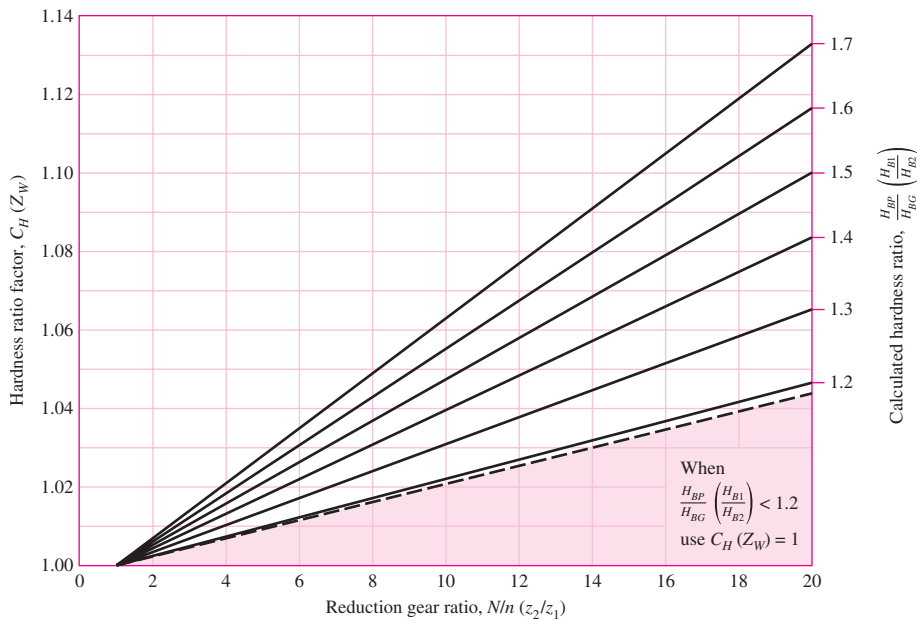
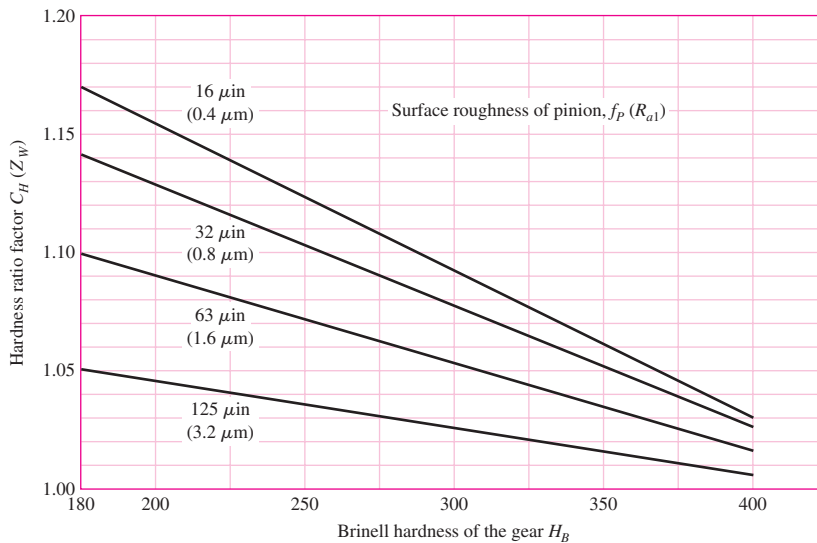


Figure 15-11

Hardness-ratio factor $C_H(Z_W)$ for surface-hardened pinions.
(Source: ANSI/AGMA 2003-B97.)



Reliability Factors $C_R(Z_Z)$ and $K_R(Y_Z)$

Table 15-3 displays the reliability factors. Note that $C_R = \sqrt{K_R}$ and $Z_Z = \sqrt{Y_Z}$. Logarithmic interpolation equations are

$$Y_Z = K_R = \begin{cases} 0.50 - 0.25 \log(1 - R) & 0.99 \leq R \leq 0.999 & (15-19) \\ 0.70 - 0.15 \log(1 - R) & 0.90 \leq R < 0.99 & (15-20) \end{cases}$$

The reliability of the stress (fatigue) numbers allowable in Tables 15-4, 15-5, 15-6, and 15-7 is 0.99.

Table 15-3

Reliability Factors
Source: ANSI/AGMA
2003-B97.

Requirements of Application	Reliability Factors for Steel*	
	$C_R (Z_Z)$	$K_R (Y_Z)^\dagger$
Fewer than one failure in 10 000	1.22	1.50
Fewer than one failure in 1000	1.12	1.25
Fewer than one failure in 100	1.00	1.00
Fewer than one failure in 10	0.92	0.85 [‡]
Fewer than one failure in 2	0.84	0.70 [§]

*At the present time there are insufficient data concerning the reliability of bevel gears made from other materials.

[†]Tooth breakage is sometimes considered a greater hazard than pitting. In such cases a greater value of $K_R (Y_Z)$ is selected for bending.

[‡]At this value plastic flow might occur rather than pitting.

[§]From test data extrapolation.

Table 15-4

Allowable Contact Stress Number for Steel Gears, $s_{ac} (\sigma_{H \text{ lim}})$ Source: ANSI/AGMA 2003-B97.

Material Designation	Heat Treatment	Minimum Surface* Hardness	Allowable Contact Stress Number, $s_{ac} (\sigma_{H \text{ lim}})$ lbf/in ² (N/mm ²)		
			Grade 1 [†]	Grade 2 [†]	Grade 3 [†]
Steel	Through-hardened [‡]	Fig. 15-12	Fig. 15-12	Fig. 15-12	
	Flame or induction hardened [§]	50 HRC	175 000 (1210)	190 000 (1310)	
	Carburized and case hardened [§]	2003-B97 Table 8	200 000 (1380)	225 000 (1550)	250 000 (1720)
AISI 4140	Nitrided [§]	84.5 HR15N		145 000 (1000)	
Nitralloy 135M	Nitrided [§]	90.0 HR15N		160 000 (1100)	

*Hardness to be equivalent to that at the tooth middepth in the center of the face width.

[†]See ANSI/AGMA 2003-B97, Tables 8 through 11, for metallurgical factors for each stress grade of steel gears.

[‡]These materials must be annealed or normalized as a minimum.

[§]The allowable stress numbers indicated may be used with the case depths prescribed in 21.1, ANSI/AGMA 2003-B97.

Elastic Coefficient for Pitting Resistance $C_p (Z_E)$

$$C_p = \sqrt{\frac{1}{\pi [(1 - \nu_p^2)/E_p + (1 - \nu_G^2)/E_G]}} \quad (15-21)$$

$$Z_E = \sqrt{\frac{1}{\pi [(1 - \nu_1^2)/E_1 + (1 - \nu_2^2)/E_2]}}$$

Table 15-5Allowable Contact Stress Number for Iron Gears, $s_{ac}(\sigma_{H \text{ lim}})$ Source: ANSI/AGMA 2003-B97.

Material	Material Designation		Heat Treatment	Typical Minimum Surface Hardness	Allowable Contact Stress Number, $s_{ac}(\sigma_{H \text{ lim}})$ lbf/in ² (N/mm ²)
	ASTM	ISO			
Cast iron	ASTM A48	ISO/DR 185			
	Class 30	Grade 200	As cast	175 HB	50 000 (345)
	Class 40	Grade 300	As cast	200 HB	65 000 (450)
Ductile (nodular) iron	ASTM A536	ISO/DIS 1083			
	Grade 80-55-06	Grade 600-370-03	Quenched and tempered	180 HB	94 000 (650)
	Grade 120-90-02	Grade 800-480-02		300 HB	135 000 (930)

Table 15-6Allowable Bending Stress Numbers for Steel Gears, $s_{at}(\sigma_{F \text{ lim}})$ Source: ANSI/AGMA 2003-B97.

Material Designation	Heat Treatment	Minimum Surface Hardness	Bending Stress Number (Allowable), $s_{at}(\sigma_{F \text{ lim}})$ lbf/in ² (N/mm ²)		
			Grade 1*	Grade 2*	Grade 3*
Steel	Through-hardened	Fig. 15-13	Fig. 15-13	Fig. 15-13	
	Flame or induction hardened				
	Unhardened roots	50 HRC	15 000 (85)	13 500 (95)	
	Hardened roots		22 500 (154)		
	Carburized and case hardened [†]	2003-B97 Table 8	30 000 (205)	35 000 (240)	40 000 (275)
AISI 4140	Nitrided ^{†,‡}	84.5 HR15N		22 000 (150)	
Nitralloy 135M	Nitrided ^{†,‡}	90.0 HR15N		24 000 (165)	

*See ANSI/AGMA 2003-B97, Tables 8–11, for metallurgical factors for each stress grade of steel gears.

[†]The allowable stress numbers indicated may be used with the case depths prescribed in 21.1, ANSI/AGMA 2003-B97.[‡]The overload capacity of nitrided gears is low. Since the shape of the effective S-N curve is flat, the sensitivity to shock should be investigated before proceeding with the design.

where

 C_p = elastic coefficient, $2290 \sqrt{\text{psi}}$ for steel Z_E = elastic coefficient, $190 \sqrt{\text{N/mm}^2}$ for steel E_P and E_G = Young's moduli for pinion and gear respectively, psi E_1 and E_2 = Young's moduli for pinion and gear respectively, N/mm²**Allowable Contact Stress**Tables 15-4 and 15-5 provide values of $s_{ac}(\sigma_H)$ for steel gears and for iron gears, respectively. Figure 15-12 graphically displays allowable stress for grade 1 and 2 materials.

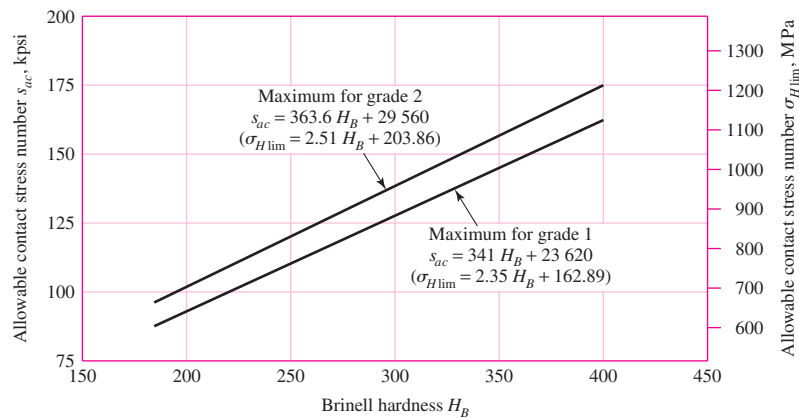
Table 15-7

Allowable Bending Stress Number for Iron Gears, s_{at} ($\sigma_{F \text{ lim}}$) Source: ANSI/AGMA 2003-B97.

Material	Material Designation		Heat Treatment	Typical Minimum Surface Hardness	Bending Stress Number (Allowable), s_{at} ($\sigma_{F \text{ lim}}$) lbf/in ² (N/mm ²)
	ASTM	ISO			
Cast iron	ASTM A48	ISO/DR 185			
	Class 30	Grade 200	As cast	175 HB	4500 (30)
	Class 40	Grade 300	As cast	200 HB	6500 (45)
Ductile (nodular) iron	ASTM A536	ISO/DIS 1083			
	Grade 80-55-06	Grade 600-370-03	Quenched and tempered	180 HB	10 000 (70)
	Grade 120-90-02	Grade 800-480-02		300 HB	13 500 (95)

Figure 15-12

Allowable contact stress number for through-hardened steel gears, s_{ac} ($\sigma_{H \text{ lim}}$). (Source: ANSI/AGMA 2003-B97.)



The equations are

$$\begin{aligned}
 s_{ac} &= 341 H_B + 23\,620 \text{ psi} && \text{grade 1} \\
 \sigma_{H \text{ lim}} &= 2.35 H_B + 162.89 \text{ MPa} && \text{grade 1} \\
 s_{ac} &= 363.6 H_B + 29\,560 \text{ psi} && \text{grade 2} \\
 \sigma_{H \text{ lim}} &= 2.51 H_B + 203.86 \text{ MPa} && \text{grade 2}
 \end{aligned} \tag{15-22}$$

Allowable Bending Stress Numbers

Tables 15-6 and 15-7 provide s_{at} ($\sigma_{F \text{ lim}}$) for steel gears and for iron gears, respectively. Figure 15-13 shows graphically allowable bending stress s_{at} ($\sigma_{H \text{ lim}}$) for through-hardened steels. The equations are

$$\begin{aligned}
 s_{at} &= 44 H_B + 2100 \text{ psi} && \text{grade 1} \\
 \sigma_{F \text{ lim}} &= 0.30 H_B + 14.48 \text{ MPa} && \text{grade 1} \\
 s_{at} &= 48 H_B + 5980 \text{ psi} && \text{grade 2} \\
 \sigma_{H \text{ lim}} &= 0.33 H_B + 41.24 \text{ MPa} && \text{grade 2}
 \end{aligned} \tag{15-23}$$

Reversed Loading

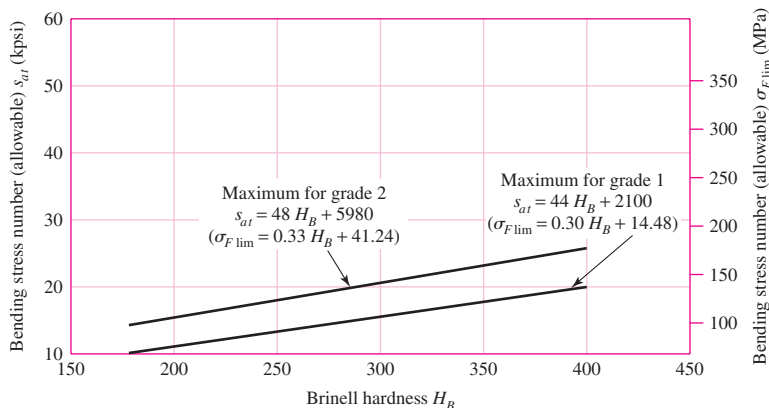
AGMA recommends use of 70 percent of allowable strength in cases where tooth load is completely reversed, as in idler gears and reversing mechanisms.

Summary

Figure 15-14 is a “roadmap” for straight-bevel gear wear relations using 2003-B97. Figure 15-15 is a similar guide for straight-bevel gear bending using 2003-B97.

Figure 15-13

Allowable bending stress number for through-hardened steel gears, $s_{at}(\sigma_{F\text{lim}})$.
(Source: ANSI/AGMA 2003-B97.)

**Figure 15-14**

“Roadmap” summary of principal straight-bevel gear wear equations and their parameters.

STRAIGHT-BEVEL GEAR WEAR

	Geometry	Force Analysis	Strength Analysis
	$d_p = \frac{N_p}{P_d}$	$W^t = \frac{2T}{d_{av}}$	$W^t = \frac{2T}{d_p}$
	$\gamma = \tan^{-1} \frac{N_G}{N_G}$	$W^r = W^t \tan \phi \cos \gamma$	$W^r = W^t \tan \phi \cos \gamma$
	$\Gamma = \tan^{-1} \frac{N_G}{N_p}$	$W^a = W^t \tan \phi \sin \gamma$	$W^a = W^t \tan \phi \sin \gamma$
	$d_{av} = d_p - F \cos \Gamma$		
Gear contact stress			$S_c = \sigma_c = C_p \left(\frac{W^t}{F d_p I} K_o K_v K_m C_s C_{xc} \right)^{1/2}$ <p>At large end of tooth Table 15-2, p. 771 Eqs. (15-5) to (15-8), p. 772 Eq. (15-11), p. 773 Eq. (15-12), p. 773 Eq. (15-9), p. 773 Fig. 15-6, p. 774 Eq. (15-21), p. 778</p>
Gear wear strength			$S_{wc} = (\sigma_c)_{\text{all}} = \frac{s_{ac} C_L C_H}{S_H K_T C_R}$ <p>Tables 15-4, 15-5, Fig. 15-12, Eq. (15-22), pp. 778–780 Fig. 15-8, Eq. (15-14), p. 775 Eqs. (15-16), (15-17), gear only, p. 776 Eqs. (15-19), (15-20), Table 15-3, pp. 777, 778 Eq. (15-18), p. 776</p>
Wear factor of safety			$S_H = \frac{(\sigma_c)_{\text{all}}}{\sigma_c}, \text{ based on strength}$ $n_w = \left(\frac{(\sigma_c)_{\text{all}}}{\sigma_c} \right)^2, \text{ based on } W^t; \text{ can be compared directly with } S_F$

Figure 15-15

“Roadmap” summary of principal straight-bevel gear bending equations and their parameters.

STRAIGHT-BEVEL GEAR BENDING

Geometry	Force Analysis	Strength Analysis
$d_p = \frac{N_P}{P}$	$W^t = \frac{2T}{d_{av}}$	$W^t = \frac{2T}{d_p}$
$\gamma = \tan^{-1} \frac{N_P}{N_G}$	$W^r = W^t \tan \phi \cos \gamma$	$W^r = W^t \tan \phi \cos \gamma$
$\Gamma = \tan^{-1} \frac{N_G}{N_P}$	$W^a = W^t \tan \phi \sin \gamma$	$W^a = W^t \tan \phi \sin \gamma$
$d_{av} = d_p - F \cos \Gamma$		

Table 15-2, p. 771

Eqs. (15-5) to (15-8), p. 772

At large end of tooth

Eq. (15-10), p. 773

Eq. (15-11), p. 773

Gear bending stress

$$S_t = \sigma = \frac{W^t}{F} P_d K_o K_v \frac{K_s K_m}{K_x J}$$

Fig. 15-7, p. 774

Eq. (15-13), p. 773

Table 15-6 or 15-7, pp. 779, 780

Fig. 15-9, Eq. (15-15), pp. 776, 775

Gear bending strength

$$S_{wt} = \sigma_{all} = \frac{s_{at} K_L}{S_F K_T K_R}$$

Eqs. (15-19), (15-20), Table 15-3 pp. 777, 778

Eq. (15-18) p. 776

Bending factor of safety

$S_F = \frac{\sigma_{all}}{\sigma}$, based on strength

$n_B = \frac{\sigma_{all}}{\sigma}$, based on W^t , same as S_F

BASED ON ANSI /AGMA 2003-B97

The standard does not mention specific steel but mentions the hardness attainable by heat treatments such as through-hardening, carburizing and case-hardening, flame-hardening, and nitriding. Through-hardening results depend on size (diametral pitch). Through-hardened materials and the corresponding Rockwell C-scale hardness at the 90 percent martensite shown in parentheses following include 1045 (50), 1060 (54), 1335 (46), 2340 (49), 3140 (49), 4047 (52), 4130 (44), 4140 (49), 4340 (49), 5145 (51), E52100 (60), 6150 (53), 8640 (50), and 9840 (49). For carburized case-hard materials the approximate core hardnesses are 1015 (22), 1025 (37), 1118 (33), 1320 (35), 2317 (30), 4320 (35), 4620 (35), 4820 (35), 6120 (35), 8620 (35), and E9310 (30). The conversion from HRC to H_B (300-kg load, 10-mm ball) is

HRC	42	40	38	36	34	32	30	28	26	24	22	20	18	16	14	12	10
H_B	388	375	352	331	321	301	285	269	259	248	235	223	217	207	199	192	187

Most bevel-gear sets are made from carburized case-hardened steel, and the factors incorporated in 2003-B97 largely address these high-performance gears. For through-hardened gears, 2003-B97 is silent on K_L and C_L , and Figs. 15–8 and 15–9 should prudently be considered as approximate.

15–4 Straight-Bevel Gear Analysis

EXAMPLE 15–1

A pair of identical straight-tooth miter gears listed in a catalog has a diametral pitch of 5 at the large end, 25 teeth, a 1.10-in face width, and a 20° normal pressure angle; the gears are grade 1 steel through-hardened with a core and case hardness of 180 Brinell. The gears are uncrowned and intended for general industrial use. They have a quality number of $Q_v = 7$. It is likely that the application intended will require outboard mounting of the gears. Use a safety factor of 1, a 10^7 cycle life, and a 0.99 reliability.

(a) For a speed of 600 rev/min find the power rating of this gearset based on AGMA bending strength.

(b) For the same conditions as in part (a) find the power rating of this gearset based on AGMA wear strength.

(c) For a reliability of 0.995, a gear life of 10^9 revolutions, and a safety factor of $S_F = S_H = 1.5$, find the power rating for this gearset using AGMA strengths.

Solution

From Figs. 15–14 and 15–15,

$$d_P = N_P/P = 25/5 = 5.000 \text{ in}$$

$$v_t = \pi d_P n_P/12 = \pi(5)600/12 = 785.4 \text{ ft/min}$$

Overload factor: uniform-uniform loading, Table 15–2, $K_o = 1.00$.

Safety factor: $S_F = 1$, $S_H = 1$.

Dynamic factor K_v : from Eq. (15–6),

$$B = 0.25(12 - 7)^{2/3} = 0.731$$

$$A = 50 + 56(1 - 0.731) = 65.06$$

$$K_v = \left(\frac{65.06 + \sqrt{785.4}}{65.06} \right)^{0.731} = 1.299$$

From Eq. (15–8),

$$v_{t \max} = [65.06 + (7 - 3)]^2 = 4769 \text{ ft/min}$$

$v_t < v_{t \max}$, that is, $785.4 < 4769$ ft/min, therefore K_v is valid. From Eq. (15–10),

$$K_s = 0.4867 + 0.2132/5 = 0.529$$

From Eq. (15–11),

$$K_{mb} = 1.25 \quad \text{and} \quad K_m = 1.25 + 0.0036(1.10)^2 = 1.254$$

From Eq. (15–13), $K_x = 1$. From Fig. 15–6, $I = 0.065$; from Fig. 15–7, $J_P = 0.216$, $J_G = 0.216$. From Eq. (15–15),

$$K_L = 1.683(10^7)^{-0.0323} = 0.99996 \doteq 1$$

From Eq. (15–14),

$$C_L = 3.4822(10^7)^{-0.0602} = 1.32$$

Since $H_{BP}/H_{BG} = 1$, then from Fig. 15–10, $C_H = 1$. From Eqs. (15–13) and (15–18), $K_x = 1$ and $K_T = 1$, respectively. From Eq. (15–20),

$$K_R = 0.70 - 0.15 \log(1 - 0.99) = 1, \quad C_R = \sqrt{K_R} = \sqrt{1} = 1$$

(a) *Bending*: From Eq. (15–23),

$$s_{at} = 44(180) + 2100 = 10\,020 \text{ psi}$$

From Eq. (15–3),

$$\begin{aligned} s_t = \sigma &= \frac{W^t}{F} P_d K_o K_v \frac{K_s K_m}{K_x J} = \frac{W^t}{1.10} (5)(1) 1.299 \frac{0.529(1.254)}{(1)(0.216)} \\ &= 18.13 W^t \end{aligned}$$

From Eq. (15–4),

$$s_{wt} = \frac{s_{at} K_L}{S_F K_T K_R} = \frac{10\,020(1)}{(1)(1)(1)} = 10\,020 \text{ psi}$$

Equating s_t and s_{wt} ,

$$18.13 W^t = 10\,020 \quad W^t = 552.6 \text{ lbf}$$

Answer

$$H = \frac{W^t v_t}{33\,000} = \frac{552.6(785.4)}{33\,000} = 13.2 \text{ hp}$$

(b) *Wear*: From Fig. 15–12,

$$s_{ac} = 341(180) + 23\,620 = 85\,000 \text{ psi}$$

From Eq. (15–2),

$$\sigma_{c,\text{all}} = \frac{s_{ac} C_L C_H}{S_H K_T C_R} = \frac{85\,000(1.32)(1)}{(1)(1)(1)} = 112\,200 \text{ psi}$$

Now $C_p = 2290\sqrt{\text{psi}}$ from definitions following Eq. (15–21). From Eq. (15–9),

$$C_s = 0.125(1.1) + 0.4375 = 0.575$$

From Eq. (15–12), $C_{xc} = 2$. Substituting in Eq. (15–1) gives

$$\begin{aligned} \sigma_c &= C_p \left(\frac{W^t}{F d P I} K_o K_v K_m C_s C_{xc} \right)^{1/2} \\ &= 2290 \left[\frac{W^t}{1.10(5)0.065} (1) 1.299(1.254) 0.575(2) \right]^{1/2} = 5242\sqrt{W^t} \end{aligned}$$

Equating σ_c and $\sigma_{c,\text{all}}$ gives

$$5242\sqrt{W^t} = 112\,200, \quad W^t = 458.1 \text{ lbf}$$

$$H = \frac{458.1(785.4)}{33\,000} = 10.9 \text{ hp}$$

Rated power for the gearset is

Answer

$$H = \min(12.9, 10.9) = 10.9 \text{ hp}$$

(c) Life goal 10^9 cycles, $R = 0.995$, $S_F = S_H = 1.5$, and from Eq. (15–15),

$$K_L = 1.683(10^9)^{-0.0323} = 0.8618$$

From Eq. (15–19),

$$K_R = 0.50 - 0.25 \log(1 - 0.995) = 1.075, \quad C_R = \sqrt{K_R} = \sqrt{1.075} = 1.037$$

From Eq. (15–14),

$$C_L = 3.4822(10^9)^{-0.0602} = 1$$

Bending: From Eq. (15–23) and part (a), $s_{at} = 10\,020$ psi. From Eq. (15–3),

$$s_t = \sigma = \frac{W^t}{1.10} 5(1) 1.299 \frac{0.529(1.254)}{(1)0.216} = 18.13W^t$$

From Eq. (15–4),

$$s_{wt} = \frac{s_{at} K_L}{S_F K_T K_R} = \frac{10\,020(0.8618)}{1.5(1)1.075} = 5355 \text{ psi}$$

Equating s_t to s_{wt} gives

$$18.13W^t = 5355 \quad W^t = 295.4 \text{ lbf}$$

$$H = \frac{295.4(785.4)}{33\,000} = 7.0 \text{ hp}$$

Wear: From Eq. (15–22), and part (b), $s_{ac} = 85\,000$ psi.

Substituting into Eq. (15–2) gives

$$\sigma_{c,\text{all}} = \frac{s_{ac} C_L C_H}{S_H K_T C_R} = \frac{85\,000(1)(1)}{1.5(1)1.037} = 54\,640 \text{ psi}$$

Substituting into Eq. (15–1) gives, from part (b), $\sigma_c = 5242\sqrt{W^t}$.

Equating σ_c to $\sigma_{c,\text{all}}$ gives

$$\sigma_c = \sigma_{c,\text{all}} = 54\,640 = 5242\sqrt{W^t} \quad W^t = 108.6 \text{ lbf}$$

The wear power is

$$H = \frac{108.6(785.4)}{33\,000} = 2.58 \text{ hp}$$

Answer The mesh rated power is $H = \min(7.0, 2.58) = 2.6$ hp.

15–5 Design of a Straight-Bevel Gear Mesh

A useful decision set for straight-bevel gear design is

- Function
 - Design factor
 - Tooth system
 - Tooth count
 - Pitch and face width
 - Quality number
 - Gear material, core and case hardness
 - Pinion material, core and case hardness
- } A priori decisions
- } Design variables

In bevel gears the quality number is linked to the wear strength. The J factor for the gear can be smaller than for the pinion. Bending strength is not linear with face width, because added material is placed at the small end of the teeth. Consequently, face width is roughly prescribed as

$$F = \min(0.3A_0, 10/P_d) \quad (15-24)$$

where A_0 is the cone distance (see Fig. 13–20), given by

$$A_0 = \frac{d_P}{2 \sin \gamma} = \frac{d_G}{2 \sin \Gamma} \quad (15-25)$$

EXAMPLE 15–2

Design a straight-bevel gear mesh for shaft centerlines that intersect perpendicularly, to deliver 6.85 hp at 900 rev/min with a gear ratio of 3:1, temperature of 300°F, normal pressure angle of 20°, using a design factor of 2. The load is uniform-uniform. Although the minimum number of teeth on the pinion is 13, which will mesh with 31 or more teeth without interference, use a pinion of 20 teeth. The material is to be AGMA grade 1 and the teeth are to be crowned. The reliability goal is 0.995 with a pinion life of 10^9 revolutions.

Solution

First we list the a priori decisions and their immediate consequences.

Function: 6.85 hp at 900 rev/min, gear ratio $m_G = 3$, 300°F environment, neither gear straddle-mounted, $K_{mb} = 1.25$ [Eq. (15–11)], $R = 0.995$ at 10^9 revolutions of the pinion,

$$\text{Eq. (15–14):} \quad (C_L)_G = 3.4822(10^9/3)^{-0.0602} = 1.068$$

$$(C_L)_P = 3.4822(10^9)^{-0.0602} = 1$$

$$\text{Eq. (15–15):} \quad (K_L)_G = 1.683(10^9/3)^{-0.0323} = 0.8929$$

$$(K_L)_P = 1.683(10^9)^{-0.0323} = 0.8618$$

$$\text{Eq. (15–19):} \quad K_R = 0.50 - 0.25 \log(1 - 0.995) = 1.075$$

$$C_R = \sqrt{K_R} = \sqrt{1.075} = 1.037$$

$$\text{Eq. (15–18):} \quad K_T = C_T = (460 + 300)/710 = 1.070$$

Design factor: $n_d = 2$, $S_F = 2$, $S_H = \sqrt{2} = 1.414$.

Tooth system: crowned, straight-bevel gears, normal pressure angle 20° ,

$$\text{Eq. (15-13):} \quad K_x = 1$$

$$\text{Eq. (15-12):} \quad C_{xc} = 1.5.$$

With $N_P = 20$ teeth, $N_G = (3)20 = 60$ teeth and from Fig. 15-14,

$$\gamma = \tan^{-1}(N_P/N_G) = \tan^{-1}(20/60) = 18.43^\circ \quad \Gamma = \tan^{-1}(60/20) = 71.57^\circ$$

From Figs. 15-6 and 15-7, $I = 0.0825$, $J_P = 0.248$, and $J_G = 0.202$. Note that $J_P > J_G$.

Decision 1: Trial diametral pitch, $P_d = 8$ teeth/in.

$$\text{Eq. (15-10):} \quad K_s = 0.4867 + 0.2132/8 = 0.5134$$

$$d_P = N_P/P_d = 20/8 = 2.5 \text{ in}$$

$$d_G = 2.5(3) = 7.5 \text{ in}$$

$$v_t = \pi d_P n_P / 12 = \pi(2.5)900/12 = 589.0 \text{ ft/min}$$

$$W^t = 33\,000 \text{ hp}/v_t = 33\,000(6.85)/589.0 = 383.8 \text{ lbf}$$

$$\text{Eq. (15-25):} \quad A_0 = d_P/(2 \sin \gamma) = 2.5/(2 \sin 18.43^\circ) = 3.954 \text{ in}$$

$$\text{Eq. (15-24):}$$

$$F = \min(0.3A_0, 10/P_d) = \min[0.3(3.954), 10/8] = \min(1.186, 1.25) = 1.186 \text{ in}$$

Decision 2: Let $F = 1.25$ in. Then,

$$\text{Eq. (15-9):} \quad C_s = 0.125(1.25) + 0.4375 = 0.5937$$

$$\text{Eq. (15-11):} \quad K_m = 1.25 + 0.0036(1.25)^2 = 1.256$$

Decision 3: Let the transmission accuracy number be 6. Then, from Eq. (15-6),

$$B = 0.25(12 - 6)^{2/3} = 0.8255$$

$$A = 50 + 56(1 - 0.8255) = 59.77$$

$$\text{Eq. (15-5):} \quad K_v = \left(\frac{59.77 + \sqrt{589.0}}{59.77} \right)^{0.8255} = 1.325$$

Decision 4: Pinion and gear material and treatment. Carburize and case-harden grade ASTM 1320 to

Core 21 HRC (H_B is 229 Brinell)

Case 55-64 HRC (H_B is 515 Brinell)

From Table 15-4, $s_{ac} = 200\,000$ psi and from Table 15-6, $s_{at} = 30\,000$ psi.

Gear bending: From Eq. (15-3), the bending stress is

$$\begin{aligned} (s_t)_G &= \frac{W^t}{F} P_d K_o K_v \frac{K_s K_m}{K_x J_G} = \frac{383.8}{1.25} 8(1) 1.325 \frac{0.5134(1.256)}{(1)0.202} \\ &= 10\,390 \text{ psi} \end{aligned}$$

The bending strength, from Eq. (15–4), is given by

$$(s_{wt})_G = \left(\frac{s_{at} K_L}{S_F K_T K_R} \right)_G = \frac{30\,000(0.8929)}{2(1.070)1.075} = 11\,640 \text{ psi}$$

The strength exceeds the stress by a factor of $11640/10390 = 1.12$, giving an actual factor of safety of $(S_F)_G = 2(1.12) = 2.24$.

Pinion bending: The bending stress can be found from

$$(s_t)_P = (s_t)_G \frac{J_G}{J_P} = 10\,390 \frac{0.202}{0.248} = 8463 \text{ psi}$$

The bending strength, again from Eq. (15–4), is given by

$$(s_{wt})_P = \left(\frac{s_{at} K_L}{S_F K_T K_R} \right)_P = \frac{30\,000(0.8618)}{2(1.070)1.075} = 11\,240 \text{ psi}$$

The strength exceeds the stress by a factor of $11\,240/8463 = 1.33$, giving an actual factor of safety of $(S_F)_P = 2(1.33) = 2.66$.

Gear wear: The load-induced contact stress for the pinion and gear, from Eq. (15–1), is

$$\begin{aligned} s_c &= C_p \left(\frac{W^t}{F d_p I} K_o K_v K_m C_s C_{xc} \right)^{1/2} \\ &= 2290 \left[\frac{383.8}{1.25(2.5)0.0825} (1)1.325(1.256)0.5937(1.5) \right]^{1/2} \\ &= 107\,560 \text{ psi} \end{aligned}$$

From Eq. (15–2) the contact strength of the gear is

$$(s_{wc})_G = \left(\frac{s_{ac} C_L C_H}{S_H K_T C_R} \right)_G = \frac{200\,000(1.068)(1)}{\sqrt{2}(1.070)1.037} = 136\,120 \text{ psi}$$

The strength exceeds the stress by a factor of $136\,120/107\,560 = 1.266$, giving an actual factor of safety of $(S_H)_G^2 = 1.266^2(2) = 3.21$.

Pinion wear: From Eq. (15–2) the contact strength of the pinion is

$$(s_{wc})_P = \left(\frac{s_{ac} C_L C_H}{S_H K_T C_R} \right)_P = \frac{200\,000(1)(1)}{\sqrt{2}(1.070)1.037} = 127\,450 \text{ psi}$$

The strength exceeds the stress by a factor of $136\,120/127\,450 = 1.068$, giving an actual factor of safety of $(S_H)_P^2 = 1.068^2(2) = 2.28$.

The actual factors of safety are 2.24, 2.66, 3.21, and 2.28. Making a direct comparison of the factors, we note that the threat from gear bending and pinion wear are practically equal. We also note that three of the ratios are comparable. Our goal would be to make changes in the design decisions that drive the factors closer to 2. The next step would be to adjust the design variables. It is obvious that an iterative process is involved. We need a figure of merit to order the designs. A computer program clearly is desirable.

15–6 Worm Gearing—AGMA Equation

Since they are essentially nonenveloping worm gears, the *crossed helical* gears, shown in Fig. 15–16, can be considered with other worm gearing. Because the teeth of worm gears have *point contact* changing to *line contact* as the gears are used, worm gears are said to “wear in,” whereas other types “wear out.”

Crossed helical gears, and worm gears too, usually have a 90° shaft angle, though this need not be so. The relation between the shaft and helix angles is

$$\Sigma = \psi_P \pm \psi_G \quad (15-26)$$

where Σ is the shaft angle. The plus sign is used when both helix angles are of the same hand, and the minus sign when they are of opposite hand. The subscript P in Eq. (15–26) refers to the pinion (worm); the subscript W is used for this same purpose. The subscript G refers to the gear, also called *gear wheel*, *worm wheel*, or simply the *wheel*. Table 15–8 gives cylindrical worm dimensions common to worm and gear.

Section 13–11 introduced worm gears, and Sec. 13–17 developed the force analysis and efficiency of worm gearing to which we will refer. Here our interest is in strength and durability. Good proportions indicate the pitch worm diameter d falls in the range

$$\frac{C^{0.875}}{3} \leq d \leq \frac{C^{0.875}}{1.6} \quad (15-27)$$

Figure 15–16

View of the pitch cylinders of a pair of crossed helical gears.

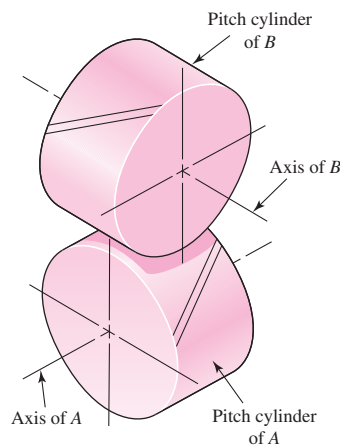


Table 15–8

Cylindrical Worm
Dimensions Common to
Both Worm and Gear*

Quantity	Symbol	ϕ_n		
		14.5° $N_W \leq 2$	20° $N_W \leq 2$	25° $N_W > 2$
Addendum	a	$0.3183p_x$	$0.3183p_x$	$0.286p_x$
Dedendum	b	$0.3683p_x$	$0.3683p_x$	$0.349p_x$
Whole depth	h_t	$0.6866p_x$	$0.6866p_x$	$0.635p_x$

*The table entries are for a tangential diametral pitch of the gear of $P_t = 1$.

where C is the center-to-center distance.² AGMA relates the allowable tangential force on the worm-gear tooth $(W^t)_{\text{all}}$ to other parameters by

$$(W^t)_{\text{all}} = C_s D_m^{0.8} F_e C_m C_v \quad (15-28)$$

where C_s = materials factor

D_m = mean gear diameter, in (mm)

F_e = effective face width of the gear (actual face width, but not to exceed $0.67d_m$, the mean worm diameter), in (mm)

C_m = ratio correction factor

C_v = velocity factor

The friction force W_f is given by

$$W_f = \frac{f W^t}{\cos \lambda \cos \phi_n} \quad (15-29)$$

where f = coefficient of friction

λ = lead angle at mean worm diameter

ϕ_n = normal pressure angle

The sliding velocity V_s is

$$V_s = \frac{\pi n_w d_m}{12 \cos \lambda} \quad (15-30)$$

where n_w = rotative speed of the worm and d_m = mean worm diameter. The torque at the worm gear is

$$T_G = \frac{W^t D_m}{2} \quad (15-31)$$

where D_m is the mean gear diameter.

The parameters in Eq. (15–28) are, quantitatively,

$$C_s = 270 + 10.37C^3 \quad C \leq 3 \text{ in} \quad (15-32)$$

For sand-cast gears,

$$C_s = \begin{cases} 1000 & C > 3 \quad d_G \leq 2.5 \text{ in} \\ 1190 - 477 \log d_G & C > 3 \quad d_G > 2.5 \text{ in} \end{cases} \quad (15-33)$$

For chilled-cast gears,

$$C_s = \begin{cases} 1000 & C > 3 \quad d_G \leq 8 \text{ in} \\ 1412 - 456 \log d_G & C > 3 \quad d_G > 8 \text{ in} \end{cases} \quad (15-34)$$

²ANSI/AGMA 6034-B92, February 1992, *Practice for Enclosed Cylindrical Wormgear Speed-Reducers and Gear Motors*; and ANSI/AGMA 6022-C93, Dec. 1993, *Design Manual for Cylindrical Wormgearing*. Note: Equations (15–32) to (15–38) are contained in Annex C of 6034-B92 for informational purposes only. To comply with ANSI/AGMA 6034-B92, use the tabulations of these rating factors provided in the standard.

For centrifugally cast gears,

$$C_s = \begin{cases} 1000 & C > 3 & d_G \leq 25 \text{ in} \\ 1251 - 180 \log d_G & C > 3 & d_G > 25 \text{ in} \end{cases} \quad (15-35)$$

The ratio correction factor C_m is given by

$$C_m = \begin{cases} 0.02\sqrt{-m_G^2 + 40m_G - 76} + 0.46 & 3 < m_G \leq 20 \\ 0.0107\sqrt{-m_G^2 + 56m_G + 5145} & 20 < m_G \leq 76 \\ 1.1483 - 0.00658m_G & m_G > 76 \end{cases} \quad (15-36)$$

The velocity factor C_v is given by

$$C_v = \begin{cases} 0.659 \exp(-0.0011 V_s) & V_s < 700 \text{ ft/min} \\ 13.31 V_s^{-0.571} & 700 \leq V_s < 3000 \text{ ft/min} \\ 65.52 V_s^{-0.774} & V_s > 3000 \text{ ft/min} \end{cases} \quad (15-37)$$

AGMA reports the coefficient of friction f as

$$f = \begin{cases} 0.15 & V_s = 0 \\ 0.124 \exp(-0.074 V_s^{0.645}) & 0 < V_s \leq 10 \text{ ft/min} \\ 0.103 \exp(-0.110 V_s^{0.450}) + 0.012 & V_s > 10 \text{ ft/min} \end{cases} \quad (15-38)$$

Now we examine some worm-gear mesh geometry. The addendum a and dedendum b are

$$a = \frac{p_x}{\pi} = 0.3183 p_x \quad (15-39)$$

$$b = \frac{1.157 p_x}{\pi} = 0.3683 p_x \quad (15-40)$$

The full depth h_t is

$$h_t = \begin{cases} \frac{2.157 p_x}{\pi} = 0.6866 p_x & p_x \geq 0.16 \text{ in} \\ \frac{2.200 p_x}{\pi} + 0.002 = 0.7003 p_x + 0.002 & p_x < 0.16 \text{ in} \end{cases} \quad (15-41)$$

The worm outside diameter d_0 is

$$d_0 = d + 2a \quad (15-42)$$

The worm root diameter d_r is

$$d_r = d - 2b \quad (15-43)$$

The worm-gear throat diameter D_t is

$$D_t = D + 2a \quad (15-44)$$

where D is the worm gear pitch diameter. The worm-gear root diameter D_r is

$$D_r = D - 2b \quad (15-45)$$

The clearance c is

$$c = b - a \quad (15-46)$$

The worm face width (maximum) $(F_W)_{\max}$ is

$$(F_W)_{\max} = 2\sqrt{\left(\frac{D_t}{2}\right)^2 - \left(\frac{D}{2} - a\right)^2} = 2\sqrt{2Da} \quad (15-47)$$

which was simplified using Eq. (15-44). The worm-gear face width F_G is

$$F_G = \begin{cases} 2d_m/3 & p_x > 0.16 \text{ in} \\ 1.125\sqrt{(d_0 + 2c)^2 - (d_0 - 4a)^2} & p_x \leq 0.16 \text{ in} \end{cases} \quad (15-48)$$

The heat loss rate H_{loss} from the worm-gear case in ft · lbf/min is

$$H_{\text{loss}} = 33\,000(1 - e)H_{\text{in}} \quad (15-49)$$

where e is efficiency, given by Eq. (13-46), and H_{in} is the input horsepower from the worm. The overall coefficient \dot{h}_{CR} for combined convective and radiative heat transfer from the worm-gear case in ft · lbf/(min · in² · °F) is

$$\dot{h}_{\text{CR}} = \begin{cases} \frac{n_W}{6494} + 0.13 & \text{no fan on worm shaft} \\ \frac{n_W}{3939} + 0.13 & \text{fan on worm shaft} \end{cases} \quad (15-50)$$

When the case lateral area A is expressed in in², the temperature of the oil sump t_s is given by

$$t_s = t_a + \frac{H_{\text{loss}}}{\dot{h}_{\text{CR}}A} = \frac{33\,000(1 - e)(H)_{\text{in}}}{\dot{h}_{\text{CR}}A} + t_a \quad (15-51)$$

Bypassing Eqs. (15-49), (15-50), and (15-51) one can apply the AGMA recommendation for minimum lateral area A_{\min} in in² using

$$A_{\min} = 43.20C^{1.7} \quad (15-52)$$

Because worm teeth are inherently much stronger than worm-gear teeth, they are not considered. The teeth in worm gears are short and thick on the edges of the face; midplane they are thinner as well as curved. Buckingham³ adapted the Lewis equation for this case:

$$\sigma_a = \frac{W_G^t}{p_n F_e y} \quad (15-53)$$

where $p_n = p_x \cos \lambda$ and y is the Lewis form factor related to circular pitch. For $\phi_n = 14.5^\circ$, $y = 0.100$; $\phi_n = 20^\circ$, $y = 0.125$; $\phi_n = 25^\circ$, $y = 0.150$; $\phi_n = 30^\circ$, $y = 0.175$.

³Earle Buckingham, *Analytical Mechanics of Gears*, McGraw-Hill, New York, 1949, p. 495.

15-7 Worm-Gear Analysis

Compared to other gearing systems worm-gear meshes have a much lower mechanical efficiency. Cooling, for the benefit of the lubricant, becomes a design constraint sometimes resulting in what appears to be an oversize gear case in light of its contents. If the heat can be dissipated by natural cooling, or simply with a fan on the wormshaft, simplicity persists. Water coils within the gear case or lubricant outpumping to an external cooler is the next level of complexity. For this reason, gear-case area is a design decision.

To reduce cooling load, use multiple-thread worms. Also keep the worm pitch diameter as small as possible.

Multiple-thread worms can remove the self-locking feature of many worm-gear drives. When the worm drives the gearset, the mechanical efficiency e_W is given by

$$e_W = \frac{\cos \phi_n - f \tan \lambda}{\cos \phi_n + f \cot \lambda} \quad (15-54)$$

With the gear driving the gearset, the mechanical efficiency e_G is given by

$$e_G = \frac{\cos \phi_n - f \cot \lambda}{\cos \phi_n + f \tan \lambda} \quad (15-55)$$

To ensure that the worm gear will drive the worm,

$$f_{\text{stat}} < \cos \phi_n \tan \lambda \quad (15-56)$$

where values of f_{stat} can be found in ANSI/AGMA 6034-B92. To prevent the worm gear from driving the worm, refer to clause 9 of 6034-B92 for a discussion of self-locking in the static condition.

It is important to have a way to relate the tangential component of the gear force W_G^t to the tangential component of the worm force W_W^t , which includes the role of friction and the angularities of ϕ_n and λ . Refer to Eq. (13-45) solved for W_W^t :

$$W_W^t = W_G^t \frac{\cos \phi_n \sin \lambda + f \cos \lambda}{\cos \phi_n \cos \lambda - f \sin \lambda} \quad (15-57)$$

In the absence of friction

$$W_W^t = W_G^t \tan \lambda$$

The mechanical efficiency of most gearing is very high, which allows power in and power out to be used almost interchangeably. Worm gearsets have such poor efficiencies that we work with, and speak of, output power. The magnitude of the gear transmitted force W_G^t can be related to the output horsepower H_0 , the application factor K_a , the efficiency e , and design factor n_d by

$$W_G^t = \frac{33\,000 n_d H_0 K_a}{V_G e} \quad (15-58)$$

We use Eq. (15-57) to obtain the corresponding worm force W_W^t . It follows that

$$H_W = \frac{W_W^t V_W}{33\,000} = \frac{\pi d_W n_W W_W^t}{12(33\,000)} \text{ hp} \quad (15-59)$$

$$H_G = \frac{W_G^t V_G}{33\,000} = \frac{\pi d_G n_G W_G^t}{12(33\,000)} \text{ hp} \quad (15-60)$$

Table 15-9

Largest Lead Angle
 Associated with a
 Normal Pressure Angle
 ϕ_n for Worm Gearing

ϕ_n	Maximum Lead Angle λ_{\max}	
14.5°	16°	
20°	25°	
25°	35°	
30°	45°	

From Eq. (13-44),

$$W_f = \frac{f W_G^t}{f \sin \lambda - \cos \phi_n \cos \lambda} \quad (15-61)$$

The sliding velocity of the worm at the pitch cylinder V_s is

$$V_s = \frac{\pi d n_w}{12 \cos \lambda} \quad (15-62)$$

and the friction power H_f is given by

$$H_f = \frac{|W_f| V_s}{33\,000} \text{ hp} \quad (15-63)$$

Table 15-9 gives the largest lead angle λ_{\max} associated with normal pressure angle ϕ_n .

EXAMPLE 15-3

A single-thread steel worm rotates at 1800 rev/min, meshing with a 24-tooth worm gear transmitting 3 hp to the output shaft. The worm pitch diameter is 3 in and the tangential diametral pitch of the gear is 4 teeth/in. The normal pressure angle is 14.5°. The ambient temperature is 70°F. The application factor is 1.25 and the design factor is 1; gear face width is 2 in, lateral case area 600 in², and the gear is chill-cast bronze.

- Find the gear geometry.
- Find the transmitted gear forces and the mesh efficiency.
- Is the mesh sufficient to handle the loading?
- Estimate the lubricant sump temperature.

Solution

(a) $m_G = N_G/N_W = 24/1 = 24$, gear: $D = N_G/P_t = 24/4 = 6.000$ in, worm: $d = 3.000$ in. The axial circular pitch p_x is $p_x = \pi/P_t = \pi/4 = 0.7854$ in. $C = (3 + 6)/2 = 4.5$ in.

$$\text{Eq. (15-39):} \quad a = p_x/\pi = 0.7854/\pi = 0.250 \text{ in}$$

$$\text{Eq. (15-40):} \quad b = 0.3683 p_x = 0.3683(0.7854) = 0.289 \text{ in}$$

$$\text{Eq. (15-41):} \quad h_t = 0.6866 p_x = 0.6866(0.7854) = 0.539 \text{ in}$$

$$\text{Eq. (15-42):} \quad d_0 = 3 + 2(0.250) = 3.500 \text{ in}$$

$$\text{Eq. (15-43):} \quad d_r = 3 - 2(0.289) = 2.422 \text{ in}$$

$$\text{Eq. (15-44):} \quad D_t = 6 + 2(0.250) = 6.500 \text{ in}$$

$$\text{Eq. (15-45):} \quad D_r = 6 - 2(0.289) = 5.422 \text{ in}$$

$$\text{Eq. (15-46):} \quad c = 0.289 - 0.250 = 0.039 \text{ in}$$

$$\text{Eq. (15-47):} \quad (F_W)_{\max} = 2\sqrt{2(6)(0.250)} = 3.464 \text{ in}$$

The tangential speeds of the worm, V_W , and gear, V_G , are, respectively,

$$V_W = \pi(3)1800/12 = 1414 \text{ ft/min} \quad V_G = \frac{\pi(6)1800/24}{12} = 117.8 \text{ ft/min}$$

The lead of the worm, from Eq. (13–27), is $L = p_x N_W = 0.7854(1) = 0.7854$ in. The lead angle λ , from Eq. (13–28), is

$$\lambda = \tan^{-1} \frac{L}{\pi d} = \tan^{-1} \frac{0.7854}{\pi(3)} = 4.764^\circ$$

The normal diametral pitch for a worm gear is the same as for a helical gear, which from Eq. (13–18) with $\psi = \lambda$ is

$$P_n = \frac{P_t}{\cos \lambda} = \frac{4}{\cos 4.764^\circ} = 4.014$$

$$p_n = \frac{\pi}{P_n} = \frac{\pi}{4.014} = 0.7827 \text{ in}$$

The sliding velocity, from Eq. (15–62), is

$$V_s = \frac{\pi d n_W}{12 \cos \lambda} = \frac{\pi(3)1800}{12 \cos 4.764^\circ} = 1419 \text{ ft/min}$$

(b) The coefficient of friction, from Eq. (15–38), is

$$f = 0.103 \exp[-0.110(1419)^{0.450}] + 0.012 = 0.0178$$

The efficiency e , from Eq. (13–46), is

$$\text{Answer} \quad e = \frac{\cos \phi_n - f \tan \lambda}{\cos \phi_n + f \cot \lambda} = \frac{\cos 14.5^\circ - 0.0178 \tan 4.764^\circ}{\cos 14.5^\circ + 0.0178 \cot 4.764^\circ} = 0.818$$

The designer used $n_d = 1$, $K_a = 1.25$ and an output horsepower of $H_0 = 3$ hp. The gear tangential force component W_G^t , from Eq. (15–58), is

$$\text{Answer} \quad W_G^t = \frac{33\,000 n_d H_0 K_a}{V_G e} = \frac{33\,000(1)3(1.25)}{117.8(0.818)} = 1284 \text{ lbf}$$

Answer The tangential force on the worm is given by Eq. (15–57):

$$\begin{aligned} W_W^t &= W_G^t \frac{\cos \phi_n \sin \lambda + f \cos \lambda}{\cos \phi_n \cos \lambda - f \sin \lambda} \\ &= 1284 \frac{\cos 14.5^\circ \sin 4.764^\circ + 0.0178 \cos 4.764^\circ}{\cos 14.5^\circ \cos 4.764^\circ - 0.0178 \sin 4.764^\circ} = 131 \text{ lbf} \end{aligned}$$

(c)

$$\text{Eq. (15–34):} \quad C_s = 1000$$

$$\text{Eq. (15–36):} \quad C_m = 0.0107 \sqrt{-24^2 + 56(24) + 5145} = 0.823$$

$$\text{Eq. (15–37):} \quad C_v = 13.31(1419)^{-0.571} = 0.211^4$$

⁴Note: From ANSI/AGMA 6034-B92, the rating factors are $C_s = 1000$, $C_m = 0.825$, $C_v = 0.214$, and $f = 0.0185$.

$$\begin{aligned} \text{Eq. (15-28): } (W^t)_{\text{all}} &= C_s D^{0.8} (F_e)_G C_m C_v \\ &= 1000(6)^{0.8} (2) 0.823 (0.211) = 1456 \text{ lbf} \end{aligned}$$

Since $W'_G < (W^t)_{\text{all}}$, the mesh will survive at least 25 000 h. The friction force W_f is given by Eq. (15-61):

$$\begin{aligned} W_f &= \frac{f W'_G}{f \sin \lambda - \cos \phi_n \cos \lambda} = \frac{0.0178(1284)}{0.0178 \sin 4.764^\circ - \cos 14.5^\circ \cos 4.764^\circ} \\ &= -23.7 \text{ lbf} \end{aligned}$$

The power dissipated in frictional work H_f is given by Eq. (15-63):

$$H_f = \frac{|W_f| V_s}{33\,000} = \frac{|-23.7| 1419}{33\,000} = 1.02 \text{ hp}$$

The worm and gear powers, H_W and H_G , are given by

$$H_W = \frac{W'_W V_W}{33\,000} = \frac{131(1414)}{33\,000} = 5.61 \text{ hp} \quad H_G = \frac{W'_G V_G}{33\,000} = \frac{1284(117.8)}{33\,000} = 4.58 \text{ hp}$$

Answer Gear power is satisfactory. Now,

$$P_n = P_t / \cos \lambda = 4 / \cos 4.764^\circ = 4.014$$

$$p_n = \pi / P_n = \pi / 4.014 = 0.7827 \text{ in}$$

The bending stress in a gear tooth is given by Buckingham's adaptation of the Lewis equation, Eq. (15-53), as

$$(\sigma)_G = \frac{W'_G}{p_n F_G y} = \frac{1284}{0.7827(2)(0.1)} = 8200 \text{ psi}$$

Answer Stress in gear satisfactory.

(d)

$$\text{Eq. (15-52): } A_{\text{min}} = 43.2 C^{1.7} = 43.2(4.5)^{1.7} = 557 \text{ in}^2$$

The gear case has a lateral area of 600 in².

$$\begin{aligned} \text{Eq. (15-49): } H_{\text{loss}} &= 33\,000(1 - e) H_{\text{in}} = 33\,000(1 - 0.818) 5.61 \\ &= 33\,690 \text{ ft} \cdot \text{lbf}/\text{min} \end{aligned}$$

$$\text{Eq. (15-50): } \dot{h}_{\text{CR}} = \frac{n_W}{3939} + 0.13 = \frac{1800}{3939} + 0.13 = 0.587 \text{ ft} \cdot \text{lbf}/(\text{min} \cdot \text{in}^2 \cdot ^\circ\text{F})$$

Answer Eq. (15-51):
$$t_s = t_a + \frac{H_{\text{loss}}}{\dot{h}_{\text{CR}} A} = 70 + \frac{33\,690}{0.587(600)} = 166^\circ\text{F}$$

15–8 Designing a Worm-Gear Mesh

A usable decision set for a worm-gear mesh includes

- | | | |
|---|---|--------------------|
| • Function: power, speed, m_G , K_a | } | A priori decisions |
| • Design factor: n_d | | |
| • Tooth system | | |
| • Materials and processes | | |
| • Number of threads on the worm: N_W | | |
| • Axial pitch of worm: p_x | } | Design variables |
| • Pitch diameter of the worm: d_W | | |
| • Face width of gear: F_G | | |
| • Lateral area of case: A | | |

Reliability information for worm gearing is not well developed at this time. The use of Eq. (15–28) together with the factors C_s , C_m , and C_v , with an alloy steel case-hardened worm together with customary nonferrous worm-wheel materials, will result in lives in excess of 25 000 h. The worm-gear materials in the experience base are principally bronzes:

- Tin- and nickel-bronzes (chilled-casting produces hardest surfaces)
- Lead-bronze (high-speed applications)
- Aluminum- and silicon-bronze (heavy load, slow-speed application)

The factor C_s for bronze in the spectrum sand-cast, chilled-cast, and centrifugally cast increases in the same order.

Standardization of tooth systems is not as far along as it is in other types of gearing. For the designer this represents freedom of action, but acquisition of tooling for tooth-forming is more of a problem for in-house manufacturing. When using a subcontractor the designer must be aware of what the supplier is capable of providing with on-hand tooling.

Axial pitches for the worm are usually integers, and quotients of integers are common. Typical pitches are $\frac{1}{4}$, $\frac{5}{16}$, $\frac{3}{8}$, $\frac{1}{2}$, $\frac{3}{4}$, 1, $\frac{5}{4}$, $\frac{6}{4}$, $\frac{7}{4}$, and 2, but others are possible. Table 15–8 shows dimensions common to both worm gear and cylindrical worm for proportions often used. Teeth frequently are stubbed when lead angles are 30° or larger.

Worm-gear design is constrained by available tooling, space restrictions, shaft center-to-center distances, gear ratios needed, and the designer's experience. ANSI/AGMA 6022-C93, *Design Manual for Cylindrical Wormgearing* offers the following guidance. Normal pressure angles are chosen from 14.5° , 17.5° , 20° , 22.5° , 25° , 27.5° , and 30° . The recommended minimum number of gear teeth is given in Table 15–10. The normal range of the number of threads on the worm is 1 through 10. Mean worm pitch diameter is usually chosen in the range given by Eq. (15–27).

A design decision is the axial pitch of the worm. Since acceptable proportions are couched in terms of the center-to-center distance, which is not yet known, one chooses a trial axial pitch p_x . Having N_W and a trial worm diameter d ,

$$N_G = m_G N_W \quad P_t = \frac{\pi}{p_x} \quad D = \frac{N_G}{P_t}$$

Table 15-10

 Minimum Number of
 Gear Teeth for Normal
 Pressure Angle ϕ_n

ϕ_n	$(N_G)_{\min}$
14.5	40
17.5	27
20	21
22.5	17
25	14
27.5	12
30	10

Then

$$(d)_{\text{lo}} = C^{0.875}/3 \quad (d)_{\text{hi}} = C^{0.875}/1.6$$

Examine $(d)_{\text{lo}} \leq d \leq (d)_{\text{hi}}$, and refine the selection of mean worm-pitch diameter to d_1 if necessary. Recompute the center-to-center distance as $C = (d_1 + D)/2$. There is even an opportunity to make C a round number. Choose C and set

$$d_2 = 2C - D$$

Equations (15-39) through (15-48) apply to one usual set of proportions.

EXAMPLE 15-4

Design a 10-hp 11:1 worm-gear speed-reducer mesh for a lumber mill planer feed drive for 3- to 10-h daily use. A 1720-rev/min squirrel-cage induction motor drives the planer feed ($K_a = 1.25$), and the ambient temperature is 70°F.

Solution

Function: $H_0 = 10$ hp, $m_G = 11$, $n_W = 1720$ rev/min.

Design factor: $n_d = 1.2$.

Materials and processes: case-hardened alloy steel worm, sand-cast bronze gear.

Worm threads: double, $N_W = 2$, $N_G = m_G N_W = 11(2) = 22$ gear teeth acceptable for $\phi_n = 20^\circ$, according to Table 15-10.

Decision 1: Choose an axial pitch of worm $p_x = 1.5$ in. Then,

$$P_t = \pi/p_x = \pi/1.5 = 2.0944$$

$$D = N_G/P_t = 22/2.0944 = 10.504 \text{ in}$$

$$\text{Eq. (15-39): } a = 0.3183p_x = 0.3183(1.5) = 0.4775 \text{ in (addendum)}$$

$$\text{Eq. (15-40): } b = 0.3683(1.5) = 0.5525 \text{ in (dedendum)}$$

$$\text{Eq. (15-41): } h_t = 0.6866(1.5) = 1.030 \text{ in}$$

Decision 2: Choose a mean worm diameter $d = 2.000$ in. Then

$$C = (d + D)/2 = (2.000 + 10.504)/2 = 6.252 \text{ in}$$

$$(d)_{\text{lo}} = 6.252^{0.875}/3 = 1.657 \text{ in}$$

$$(d)_{\text{hi}} = 6.252^{0.875}/1.6 = 3.107 \text{ in}$$

The range, given by Eq. (15-27), is $1.657 \leq d \leq 3.107$ in, which is satisfactory. Try $d = 2.500$ in. Recompute C :

$$C = (2.5 + 10.504)/2 = 6.502 \text{ in}$$

The range is now $1.715 \leq d \leq 3.216$ in, which is still satisfactory. Decision: $d = 2.500$ in. Then

$$\text{Eq. (13-27):} \quad L = p_x N_W = 1.5(2) = 3.000 \text{ in}$$

$$\text{Eq. (13-28):}$$

$$\lambda = \tan^{-1}[L/(\pi d)] = \tan^{-1}[3/(\pi 2.5)] = 20.905^\circ \quad (\text{from Table 15-9 lead angle OK})$$

$$\text{Eq. (15-62):} \quad V_s = \frac{\pi d n_W}{12 \cos \lambda} = \frac{\pi(2.5)1720}{12 \cos 20.905^\circ} = 1205.1 \text{ ft/min}$$

$$V_W = \frac{\pi d n_W}{12} = \frac{\pi(2.5)1720}{12} = 1125.7 \text{ ft/min}$$

$$V_G = \frac{\pi D n_G}{12} = \frac{\pi(10.504)1720/11}{12} = 430.0 \text{ ft/min}$$

$$\text{Eq. (15-33):} \quad C_s = 1190 - 477 \log 10.504 = 702.8$$

$$\text{Eq. (15-36):} \quad C_m = 0.02\sqrt{-11^2 + 40(11) - 76} + 0.46 = 0.772$$

$$\text{Eq. (15-37):} \quad C_v = 13.31(1205.1)^{-0.571} = 0.232$$

$$\text{Eq. (15-38):} \quad f = 0.103 \exp[-0.11(1205.1)^{0.45}] + 0.012 = 0.0191^5$$

$$\text{Eq. (15-54):} \quad e_w = \frac{\cos 20^\circ - 0.0191 \tan 20.905^\circ}{\cos 20^\circ + 0.0191 \cot 20.905^\circ} = 0.942$$

(If the worm gear drives, $e_G = 0.939$.) To ensure nominal 10-hp output, with adjustments for K_a , n_d , and e ,

$$\text{Eq. (15-57):} \quad W_W^t = 1222 \frac{\cos 20^\circ \sin 20.905^\circ + 0.0191 \cos 20.905^\circ}{\cos 20^\circ \cos 20.905^\circ - 0.0191 \sin 20.905^\circ} = 495.4 \text{ lbf}$$

$$\text{Eq. (15-58):} \quad W_G^t = \frac{33\,000(1.2)10(1.25)}{430(0.942)} = 1222 \text{ lbf}$$

$$\text{Eq. (15-59):} \quad H_W = \frac{\pi(2.5)1720(495.4)}{12(33\,000)} = 16.9 \text{ hp}$$

$$\text{Eq. (15-60):} \quad H_G = \frac{\pi(10.504)1720/11(1222)}{12(33\,000)} = 15.92 \text{ hp}$$

$$\text{Eq. (15-61):} \quad W_f = \frac{0.0191(1222)}{0.0191 \sin 20.905^\circ - \cos 20^\circ \cos 20.905^\circ} = -26.8 \text{ lbf}$$

$$\text{Eq. (15-63):} \quad H_f = \frac{|-26.8|1205.1}{33\,000} = 0.979 \text{ hp}$$

With $C_s = 702.8$, $C_m = 0.772$, and $C_v = 0.232$,

$$(F_e)_{\text{req}} = \frac{W_G^t}{C_s D^{0.8} C_m C_v} = \frac{1222}{702.8(10.504)^{0.8} 0.772(0.232)} = 1.479 \text{ in}$$

⁵Note: From ANSI/AGMA 6034-B92, the rating factors are $C_s = 703$, $C_m = 0.773$, $C_v = 0.2345$, and $f = 0.01995$.

Decision 3: The available range of $(F_e)_G$ is $1.479 \leq (F_e)_G \leq 2d/3$ or $1.479 \leq (F_e)_G \leq 1.667$ in. Set $(F_e)_G = 1.5$ in.

$$\text{Eq. (15-28): } W_{\text{all}}^t = 702.8(10.504)^{0.8}1.5(0.772)0.232 = 1239 \text{ lbf}$$

This is greater than 1222 lbf. There is a little excess capacity. The force analysis stands.

Decision 4:

$$\text{Eq. (15-50): } \bar{h}_{\text{CR}} = \frac{n_w}{6494} + 0.13 = \frac{1720}{6494} + 0.13 = 0.395 \text{ ft} \cdot \text{lbf}/(\text{min} \cdot \text{in}^2 \cdot ^\circ\text{F})$$

$$\text{Eq. (15-49): } H_{\text{loss}} = 33\,000(1 - e)H_w = 33\,000(1 - 0.942)16.9 = 32\,347 \text{ ft} \cdot \text{lbf}/\text{min}$$

The AGMA area, from Eq. (15-52), is $A_{\text{min}} = 43.2C^{1.7} = 43.2(6.502)^{1.7} = 1041.5 \text{ in}^2$. A rough estimate of the lateral area for 6-in clearances:

$$\text{Vertical: } d + D + 6 = 2.5 + 10.5 + 6 = 19 \text{ in}$$

$$\text{Width: } D + 6 = 10.5 + 6 = 16.5 \text{ in}$$

$$\text{Thickness: } d + 6 = 2.5 + 6 = 8.5 \text{ in}$$

$$\text{Area: } 2(19)16.5 + 2(8.5)19 + 16.5(8.5) \doteq 1090 \text{ in}^2$$

Expect an area of 1100 in². Choose: Air-cooled, no fan on worm, with an ambient temperature of 70°F.

$$t_s = t_a + \frac{H_{\text{loss}}}{\bar{h}_{\text{CR}}A} = 70 + \frac{32\,350}{0.395(1100)} = 70 + 74.5 = 144.5^\circ\text{F}$$

Lubricant is safe with some margin for smaller area.

$$\text{Eq. (13-18): } P_n = \frac{P_t}{\cos \lambda} = \frac{2.094}{\cos 20.905^\circ} = 2.242$$

$$p_n = \frac{\pi}{P_n} = \frac{\pi}{2.242} = 1.401 \text{ in}$$

Gear bending stress, for reference, is

$$\text{Eq. (15-53): } \sigma = \frac{W_G^t}{p_n F_e y} = \frac{1222}{1.401(1.5)0.125} = 4652 \text{ psi}$$

The risk is from wear, which is addressed by the AGMA method that provides $(W_G^t)_{\text{all}}$.

15-9 Buckingham Wear Load

A precursor to the AGMA method was the method of Buckingham, which identified an allowable wear load in worm gearing. Buckingham showed that the allowable gear-tooth loading for wear can be estimated from

$$(W_G^t)_{\text{all}} = K_w d_G F_e \quad (15-64)$$

where K_w = worm-gear load factor

d_G = gear-pitch diameter

F_e = worm-gear effective face width

Table 15–11Wear Factor K_w for Worm
GearingSource: Earle Buckingham,
*Design of Worm and Spiral
Gears*, Industrial Press,
New York, 1981.

Worm	Material	Gear	Thread Angle ϕ_n			
			$14\frac{1}{2}^\circ$	20°	25°	30°
Hardened steel*		Chilled bronze	90	125	150	180
Hardened steel*		Bronze	60	80	100	120
Steel, 250 BHN (min.)		Bronze	36	50	60	72
High-test cast iron		Bronze	80	115	140	165
Gray iron†		Aluminum	10	12	15	18
High-test cast iron		Gray iron	90	125	150	180
High-test cast iron		Cast steel	22	31	37	45
High-test cast iron		High-test cast iron	135	185	225	270
Steel 250 BHN (min.)		Laminated phenolic	47	64	80	95
Gray iron		Laminated phenolic	70	96	120	140

*Over 500 BHN surface.

†For steel worms, multiply given values by 0.6.

Table 15–11 gives values for K_w for worm gearsets as a function of the material pairing and the normal pressure angle.

EXAMPLE 15–5

Estimate the allowable gear wear load $(W_G^t)_{\text{all}}$ for the gearset of Ex. 15–4 using Buckingham's wear equation.

Solution

From Table 15–11 for a hardened steel worm and a bronze bear, K_w is given as 80 for $\phi_n = 20^\circ$. Equation (15–64) gives

$$(W_G^t)_{\text{all}} = 80(10.504)1.5 = 1260 \text{ lbf}$$

which is larger than the 1239 lbf of the AGMA method. The method of Buckingham does not have refinements of the AGMA method. [Is $(W_G^t)_{\text{all}}$ linear with gear diameter?]

For material combinations not addressed by AGMA, Buckingham's method allows quantitative treatment.

PROBLEMS**15–1**

An uncrowned straight-bevel pinion has 20 teeth, a diametral pitch of 6 teeth/in, and a transmission accuracy number of 6. Both the pinion and gear are made of through-hardened steel with a Brinell hardness of 300. The driven gear has 60 teeth. The gearset has a life goal of 10^9 revolutions of the pinion with a reliability of 0.999. The shaft angle is 90° ; the pinion speed is 900 rev/min. The face width is 1.25 in, and the normal pressure angle is 20° . The pinion is mounted outboard of its bearings, and the gear is straddle-mounted. Based on the AGMA bending strength, what is the power rating of the gearset? Use $K_0 = 1$, $S_F = 1$, and $S_H = 1$.

- 15-2** For the gearset and conditions of Prob. 15-1, find the power rating based on the AGMA surface durability.
- 15-3** An uncrowned straight-bevel pinion has 30 teeth, a diametral pitch of 6, and a transmission accuracy number of 6. The driven gear has 60 teeth. Both are made of No. 30 cast iron. The shaft angle is 90° . The face width is 1.25 in, the pinion speed is 900 rev/min, and the normal pressure angle is 20° . The pinion is mounted outboard of its bearings; the bearings of the gear straddle it. What is the power rating based on AGMA bending strength? (For cast iron gearsets reliability information has not yet been developed. We say the life is greater than 10^7 revolutions; set $K_L = 1$, $C_L = 1$, $C_R = 1$, $K_R = 1$; and apply a factor of safety. Use $S_F = 2$ and $S_H = \sqrt{2}$.)
- 15-4** For the gearset and conditions of Prob. 15-3, find the power rating based on AGMA surface durability. For the solutions to Probs. 15-3 and 15-4, what is the power rating of the gearset?
- 15-5** An uncrowned straight-bevel pinion has 22 teeth, a module of 4 mm, and a transmission accuracy number of 5. The pinion and the gear are made of through-hardened steel, both having core and case hardnesses of 180 Brinell. The pinion drives the 24-tooth bevel gear. The shaft angle is 90° , the pinion speed is 1800 rev/min, the face width is 25 mm, and the normal pressure angle is 20° . Both gears have an outboard mounting. Find the power rating based on AGMA pitting resistance if the life goal is 10^9 revolutions of the pinion at 0.999 reliability.
- 15-6** For the gearset and conditions of Prob. 15-5, find the power rating for AGMA bending strength.
- 15-7** In straight-bevel gearing, there are some analogs to Eqs. (14-44) and (14-45). If we have a pinion core with a hardness of $(H_B)_{11}$ and we try equal power ratings, the transmitted load W_t can be made equal in all four cases. It is possible to find these relations:

	Core	Case
Pinion	$(H_B)_{11}$	$(H_B)_{12}$
Gear	$(H_B)_{21}$	$(H_B)_{22}$

(a) For carburized case-hardened gear steel with core AGMA bending strength $(s_{at})_G$ and pinion core strength $(s_{at})_P$, show that the relationship is

$$(s_{at})_G = (s_{at})_P \frac{J_P}{J_G} m_G^{-0.0323}$$

This allows $(H_B)_{21}$ to be related to $(H_B)_{11}$.

(b) Show that the AGMA contact strength of the gear case $(s_{ac})_G$ can be related to the AGMA core bending strength of the pinion core $(s_{at})_P$ by

$$(s_{ac})_G = \frac{C_p}{(C_L)_G C_H} \sqrt{\frac{S_H^2 (s_{at})_P (K_L)_P K_x J_P K_T C_s C_{xc}}{S_F N_P I K_s}}$$

If factors of safety are applied to the transmitted load W_t , then $S_H = \sqrt{S_F}$ and S_H^2/S_F is unity. The result allows $(H_B)_{22}$ to be related to $(H_B)_{11}$.

(c) Show that the AGMA contact strength of the gear $(s_{ac})_G$ is related to the contact strength of the pinion $(s_{ac})_P$ by

$$(s_{ac})_P = (s_{ac})_G m_G^{0.0602} C_H$$

15-8 Refer to your solution to Probs. 15-1 and 15-2, which is to have a pinion core hardness of 300 Brinell. Use the relations from Prob. 15-7 to establish the hardness of the gear core and the case hardnesses of both gears.

15-9 Repeat Probs. 15-1 and 15-2 with the hardness protocol

	Core	Case
Pinion	300	372
Gear	352	344

which can be established by relations in Prob. 15-7, and see if the result matches transmitted loads W^t in all four cases.

15-10 A catalog of stock bevel gears lists a power rating of 5.2 hp at 1200 rev/min pinion speed for a straight-bevel gearset consisting of a 20-tooth pinion driving a 40-tooth gear. This gear pair has a 20° normal pressure angle, a face width of 0.71 in, and a diametral pitch of 10 teeth/in and is through-hardened to 300 BHN. Assume the gears are for general industrial use, are generated to a transmission accuracy number of 5, and are uncrowned. Given these data, what do you think about the stated catalog power rating?

15-11 Apply the relations of Prob. 15-7 to Ex. 15-1 and find the Brinell case hardness of the gears for equal allowable load W^t in bending and wear. Check your work by reworking Ex. 15-1 to see if you are correct. How would you go about the heat treatment of the gears?

15-12 Your experience with Ex. 15-1 and problems based on it will enable you to write an interactive computer program for power rating of through-hardened steel gears. Test your understanding of bevel-gear analysis by noting the ease with which the coding develops. The hardness protocol developed in Prob. 15-7 can be incorporated at the end of your code, first to display it, then as an option to loop back and see the consequences of it.

15-13 Use your experience with Prob. 15-11 and Ex. 15-2 to design an interactive computer-aided design program for straight-steel bevel gears, implementing the ANSI/AGMA 2003-B97 standard. It will be helpful to follow the decision set in Sec. 15-5, allowing the return to earlier decisions for revision as the consequences of earlier decisions develop.

15-14 A single-threaded steel worm rotates at 1725 rev/min, meshing with a 56-tooth worm gear transmitting 1 hp to the output shaft. The pitch diameter of the worm is 1.50. The tangential diametral pitch of the gear is 8 teeth per inch and the normal pressure angle is 20° . The ambient temperature is 70°F , the application factor is 1.25, the design factor is 1, the gear face is 0.5 in, the lateral case area is 850 in^2 , and the gear is sand-cast bronze.

(a) Determine and evaluate the geometric properties of the gears.

(b) Determine the transmitted gear forces and the mesh efficiency.

(c) Is the mesh sufficient to handle the loading?

(d) Estimate the lubricant sump temperature.

15-15 to 15-22 As in Ex. 15-4, design a cylindrical worm-gear mesh to connect a squirrel-cage induction motor to a liquid agitator. The motor speed is 1125 rev/min, and the velocity ratio is to be 10:1. The output power requirement is 25 hp. The shaft axes are 90° to each other. An overload factor K_o (see Table 15-2) makes allowance for external dynamic excursions of load from the nominal or average load W^t . For this service $K_o = 1.25$ is appropriate. Additionally, a design factor n_d of 1.1 is to be included to address other unquantifiable risks. For Probs. 15-15 to 15-17 use the AGMA method for $(W_G^t)_{all}$ whereas for Probs. 15-18 to 15-22, use the Buckingham method. See Table 15-12.

Table 15-12

Table Supporting
 Problems 15-15 to
 15-22

Problem No.	Method	Materials	
		Worm	Gear
15-15	AGMA	Steel, HRC 58	Sand-cast bronze
15-16	AGMA	Steel, HRC 58	Chilled-cast bronze
15-17	AGMA	Steel, HRC 58	Centrifugal-cast bronze
15-18	Buckingham	Steel, 500 Bhn	Chilled-cast bronze
15-19	Buckingham	Steel, 500 Bhn	Cast bronze
15-20	Buckingham	Steel, 250 Bhn	Cast bronze
15-21	Buckingham	High-test cast iron	Cast bronze
15-22	Buckingham	High-test cast iron	High-test cast iron

16

Clutches, Brakes, Couplings, and Flywheels

Chapter Outline

16-1	Static Analysis of Clutches and Brakes	807
16-2	Internal Expanding Rim Clutches and Brakes	812
16-3	External Contracting Rim Clutches and Brakes	820
16-4	Band-Type Clutches and Brakes	824
16-5	Frictional-Contact Axial Clutches	825
16-6	Disk Brakes	829
16-7	Cone Clutches and Brakes	833
16-8	Energy Considerations	836
16-9	Temperature Rise	837
16-10	Friction Materials	841
16-11	Miscellaneous Clutches and Couplings	844
16-12	Flywheels	846

This chapter is concerned with a group of elements usually associated with rotation that have in common the function of storing and/or transferring rotating energy. Because of this similarity of function, clutches, brakes, couplings, and flywheels are treated together in this book.

A simplified dynamic representation of a friction clutch or brake is shown in Fig. 16–1*a*. Two inertias, I_1 and I_2 , traveling at the respective angular velocities ω_1 and ω_2 , one of which may be zero in the case of brakes, are to be brought to the same speed by engaging the clutch or brake. Slippage occurs because the two elements are running at different speeds and energy is dissipated during actuation, resulting in a temperature rise. In analyzing the performance of these devices we shall be interested in:

- 1 The actuating force
- 2 The torque transmitted
- 3 The energy loss
- 4 The temperature rise

The torque transmitted is related to the actuating force, the coefficient of friction, and the geometry of the clutch or brake. This is a problem in statics, which will have to be studied separately for each geometric configuration. However, temperature rise is related to energy loss and can be studied without regard to the type of brake or clutch, because the geometry of interest is that of the heat-dissipating surfaces.

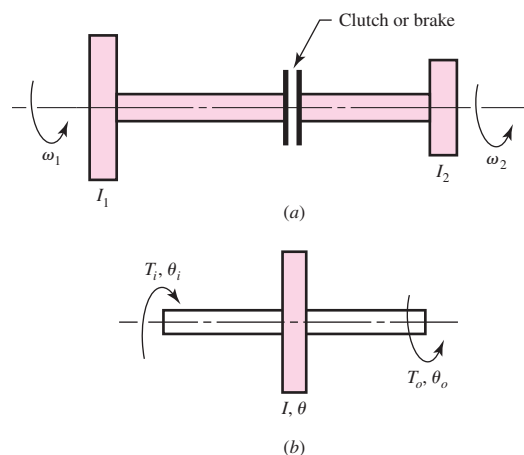
The various types of devices to be studied may be classified as follows:

- 1 Rim types with internal expanding shoes
- 2 Rim types with external contracting shoes
- 3 Band types
- 4 Disk or axial types
- 5 Cone types
- 6 Miscellaneous types

A flywheel is an inertial energy-storage device. It absorbs mechanical energy by increasing its angular velocity and delivers energy by decreasing its velocity. Figure 16–1*b* is a mathematical representation of a flywheel. An input torque T_i , corresponding to a coordinate θ_i , will cause the flywheel speed to increase. And a load or output torque T_o , with coordinate θ_o , will absorb energy from the flywheel and cause it to slow down. We shall be interested in designing flywheels so as to obtain a specified amount of speed regulation.

Figure 16-1

(*a*) Dynamic representation of a clutch or brake;
(*b*) mathematical representation of a flywheel.



16–1 Static Analysis of Clutches and Brakes

Many types of clutches and brakes can be analyzed by following a general procedure. The procedure entails the following tasks:

- Estimate, model, or measure the pressure distribution on the friction surfaces.
- Find a relationship between the largest pressure and the pressure at any point.
- Use the conditions of static equilibrium to find the braking force or torque and the support reactions.

Let us apply these tasks to the doorstep depicted in Fig. 16–2a. The stop is hinged at pin A . A normal pressure distribution $p(u)$ is shown under the friction pad as a function of position u , taken from the right edge of the pad. A similar distribution of shearing frictional traction is on the surface, of intensity $fp(u)$, in the direction of the motion of the floor relative to the pad, where f is the coefficient of friction. The width of the pad into the page is w_2 . The net force in the y direction and moment about C from the pressure are respectively,

$$N = w_2 \int_0^{w_1} p(u) du = p_{av} w_1 w_2 \quad (a)$$

$$w_2 \int_0^{w_1} p(u)u du = \bar{u} w_2 \int_0^{w_1} p(u) du = p_{av} w_1 w_2 \bar{u} \quad (b)$$

We sum the forces in the x -direction to obtain

$$\sum F_x = R_x \mp w_2 \int_0^{w_1} fp(u) du = 0$$

where $-$ or $+$ is for rightward or leftward relative motion of the floor, respectively. Assuming f constant, solving for R_x gives

$$R_x = \pm w_2 \int_0^{w_1} fp(u) du = \pm f w_1 w_2 p_{av} \quad (c)$$

Summing the forces in the y direction gives

$$\sum F_y = -F + w_2 \int_0^{w_1} p(u) du + R_y = 0$$

from which

$$R_y = F - w_2 \int_0^{w_1} p(u) du = F - p_{av} w_1 w_2 \quad (d)$$

for either direction. Summing moments about the pin located at A we have

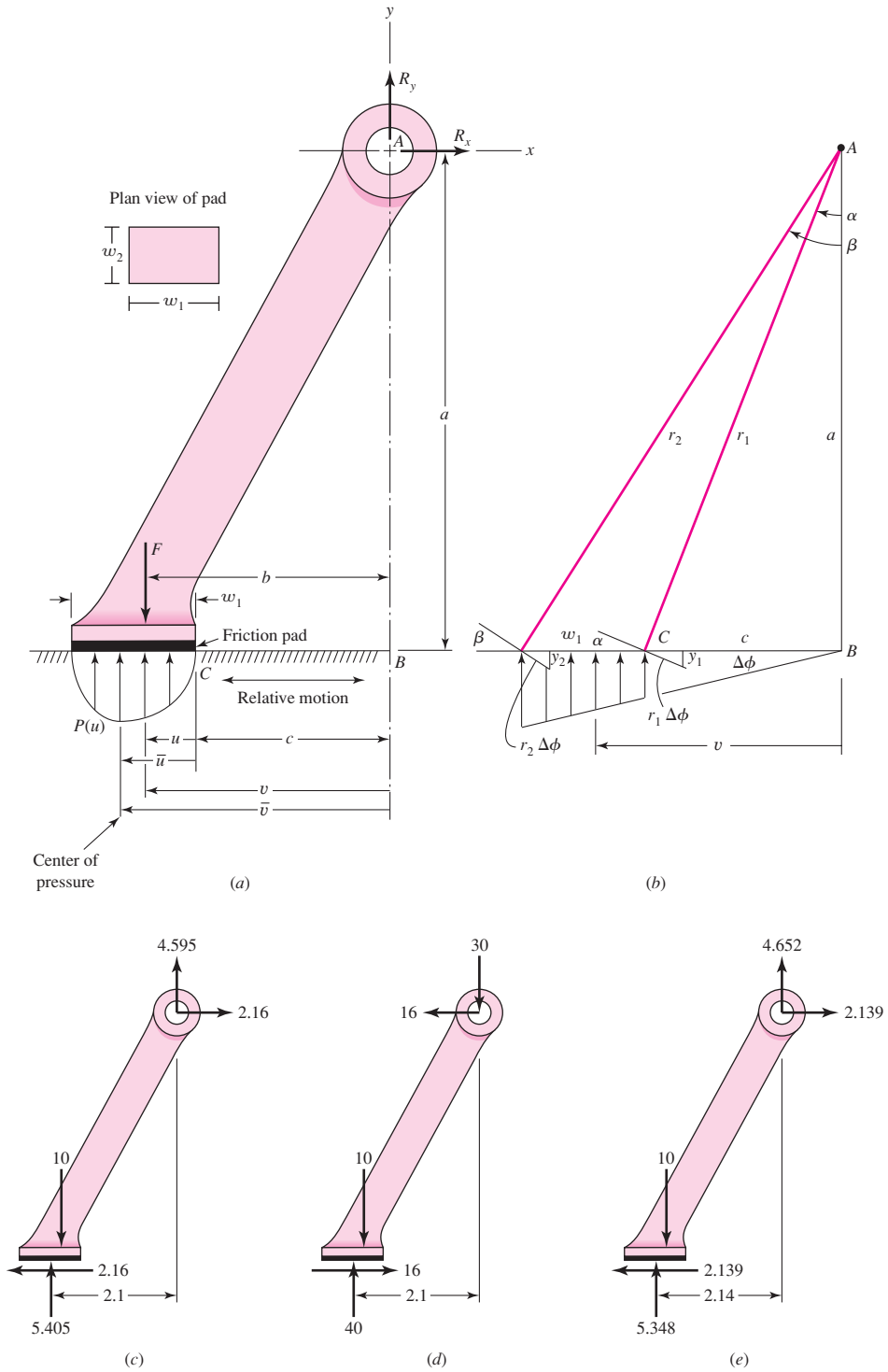
$$\sum M_A = Fb - w_2 \int_0^{w_1} p(u)(c + u) du \mp af w_2 \int_0^{w_1} p(u) du = 0$$

A brake shoe is *self-energizing* if its moment sense helps set the brake, *self-deenergizing* if the moment resists setting the brake. Continuing,

$$F = \frac{w_2}{b} \left[\int_0^{w_1} p(u)(c + u) du \pm af \int_0^{w_1} p(u) du \right] \quad (e)$$

Figure 16-2

A common doorstep.
(a) Free body of the doorstep.
(b) Trapezoidal pressure distribution on the foot pad based on linear deformation of pad. (c) Free-body diagram for leftward movement of the floor, uniform pressure, Ex. 16-1. (d) Free-body diagram for rightward movement of the floor, uniform pressure, Ex. 16-1. (e) Free-body diagram for leftward movement of the floor, trapezoidal pressure, Ex. 16-1.



Can F be equal to or less than zero? Only during rightward motion of the floor when the expression in brackets in Eq. (e) is equal to or less than zero. We set the brackets to zero or less:

$$\int_0^{w_1} p(u)(c+u) du - af \int_0^{w_1} p(u) du \leq 0$$

from which

$$f_{cr} \geq \frac{1}{a} \frac{\int_0^{w_1} p(u)(c+u) du}{\int_0^{w_1} p(u) du} = \frac{1}{a} \frac{c \int_0^{w_1} p(u) du + \int_0^{w_1} p(u)u du}{\int_0^{w_1} p(u) du}$$

$$f_{cr} \geq \frac{c + \bar{u}}{a} \quad (f)$$

where \bar{u} is the distance of the center of pressure from the right edge of the pad. The conclusion that a *self-acting* or *self-locking* phenomenon is present is independent of our knowledge of the normal pressure distribution $p(u)$. Our ability to *find* the critical value of the coefficient of friction f_{cr} is dependent on our knowledge of $p(u)$, from which we derive \bar{u} .

EXAMPLE 16-1

The doorstep depicted in Fig. 16-2a has the following dimensions: $a = 4$ in, $b = 2$ in, $c = 1.6$ in, $w_1 = 1$ in, $w_2 = 0.75$ in, where w_2 is the depth of the pad into the plane of the paper.

(a) For a leftward relative movement of the floor, an actuating force F of 10 lbf, a coefficient of friction of 0.4, use a uniform pressure distribution p_{av} , find R_x , R_y , p_{av} , and the largest pressure p_a .

(b) Repeat part a for rightward relative movement of the floor.

(c) Model the normal pressure to be the “crush” of the pad, much as if it were composed of many small helical coil springs. Find R_x , R_y , p_{av} , and p_a for leftward relative movement of the floor and other conditions as in part a.

(d) For rightward relative movement of the floor, is the doorstep a self-acting brake?

Solution

(a)

$$\text{Eq. (c):} \quad R_x = fp_{av}w_1w_2 = 0.4(1)(0.75)p_{av} = 0.3p_{av}$$

$$\text{Eq. (d):} \quad R_y = F - p_{av}w_1w_2 = 10 - p_{av}(1)(0.75) = 10 - 0.75p_{av}$$

$$\begin{aligned} \text{Eq. (e):} \quad F &= \frac{w_2}{b} \left[\int_0^1 p_{av}(c+u) du + af \int_0^1 p_{av} du \right] \\ &= \frac{w_2}{b} \left(p_{av}c \int_0^1 du + p_{av} \int_0^1 u du + afp_{av} \int_0^1 du \right) \\ &= \frac{w_2 p_{av}}{b} (c + 0.5 + af) = \frac{0.75}{2} [1.6 + 0.5 + 4(0.4)] p_{av} \\ &= 1.3875 p_{av} \end{aligned}$$

Solving for p_{av} gives

$$p_{av} = \frac{F}{1.3875} = \frac{10}{1.3875} = 7.207 \text{ psi}$$

We evaluate R_x and R_y as

Answer $R_x = 0.3(7.207) = 2.162 \text{ lbf}$

Answer $R_y = 10 - 0.75(7.207) = 4.595 \text{ lbf}$

The normal force N on the pad is $F - R_y = 10 - 4.595 = 5.405 \text{ lbf}$, upward. The line of action is through the center of pressure, which is at the center of the pad. The friction force is $fN = 0.4(5.405) = 2.162 \text{ lbf}$ directed to the left. A check of the moments about A gives

$$\begin{aligned} \sum M_A &= Fb - fNa - N(w_1/2 + c) \\ &= 10(2) - 0.4(5.405)4 - 5.405(1/2 + 1.6) \doteq 0 \end{aligned}$$

Answer The maximum pressure $p_a = p_{av} = 7.207 \text{ psi}$.

(b)

Eq. (c): $R_x = -fp_{av}w_1w_2 = -0.4(1)(0.75)p_{av} = -0.3p_{av}$

Eq. (d): $R_y = F - p_{av}w_1w_2 = 10 - p_{av}(1)(0.75) = 10 - 0.75p_{av}$

Eq. (e):
$$\begin{aligned} F &= \frac{w_2}{b} \left[\int_0^1 p_{av}(c + u) du + af \int_0^1 p_{av} du \right] \\ &= \frac{w_2}{b} \left(p_{av}c \int_0^1 du + p_{av} \int_0^1 u du + afp_{av} \int_0^1 du \right) \\ &= \frac{0.75}{2} p_{av} [1.6 + 0.5 - 4(0.4)] = 0.1875 p_{av} \end{aligned}$$

from which

$$p_{av} = \frac{F}{0.1875} = \frac{10}{0.1875} = 53.33 \text{ psi}$$

which makes

Answer $R_x = -0.3(53.33) = -16 \text{ lbf}$

Answer $R_y = 10 - 0.75(53.33) = -30 \text{ lbf}$

The normal force N on the pad is $10 + 30 = 40 \text{ lbf}$ upward. The friction shearing force is $fN = 0.4(40) = 16 \text{ lbf}$ to the right. We now check the moments about A :

$$M_A = fNa + Fb - N(c + 0.5) = 16(4) + 10(2) - 40(1.6 + 0.5) = 0$$

Note the change in average pressure from 7.207 psi in part a to 53.3 psi. Also note how directions of forces have changed. The maximum pressure p_a is the same as p_{av} , which has changed from 7.207 psi to 53.3 psi.

(c) We will model the deformation of the pad as follows. If the doorstep rotates $\Delta\phi$ counterclockwise, the right and left edges of the pad will deform down y_1 and y_2 , respectively (Fig. 16-2b). From similar triangles, $y_1/(r_1 \Delta\phi) = c/r_1$ and $y_2/(r_2 \Delta\phi) = (c + w_1)/r_2$. Thus, $y_1 = c \Delta\phi$ and $y_2 = (c + w_1) \Delta\phi$. This means that y is directly

proportional to the horizontal distance from the pivot point A ; that is, $y = C_1 v$, where C_1 is a constant (see Fig. 16–2*b*). Assuming the pressure is directly proportional to deformation, then $p(v) = C_2 v$, where C_2 is a constant. In terms of u , the pressure is $p(u) = C_2(c + u) = C_2(1.6 + u)$.

Eq. (e):

$$\begin{aligned} F &= \frac{w_2}{b} \left[\int_0^{w_1} p(u)c \, du + \int_0^{w_1} p(u)u \, du + af \int_0^{w_1} p(u) \, du \right] \\ &= \frac{0.75}{2} \left[\int_0^1 C_2(1.6 + u)1.6 \, du + \int_0^1 C_2(1.6 + u)u \, du + af \int_0^1 C_2(1.6 + u) \, du \right] \\ &= 0.375C_2[(1.6 + 0.5)1.6 + (0.8 + 0.3333) + 4(0.4)(1.6 + 0.5)] = 2.945C_2 \end{aligned}$$

Since $F = 10$ lbf, then $C_2 = 10/2.945 = 3.396$ psi/in, and $p(u) = 3.396(1.6 + u)$. The average pressure is given by

$$\text{Answer} \quad p_{av} = \frac{1}{w_1} \int_0^{w_1} p(u) \, du = \frac{1}{1} \int_0^1 3.396(1.6 + u) \, du = 3.396(1.6 + 0.5) = 7.132 \text{ psi}$$

The maximum pressure occurs at $u = 1$ in, and is

$$\text{Answer} \quad p_a = 3.396(1.6 + 1) = 8.83 \text{ psi}$$

Equations (c) and (d) of Sec. 16–1 are still valid. Thus,

$$\begin{aligned} \text{Answer} \quad R_x &= 0.3p_{av} = 0.3(7.131) = 2.139 \text{ lbf} \\ R_y &= 10 - 0.75p_{av} = 10 - 0.75(7.131) = 4.652 \text{ lbf} \end{aligned}$$

The average pressure is $p_{av} = 7.13$ psi and the maximum pressure is $p_a = 8.83$ psi, which is approximately 24 percent higher than the average pressure. The presumption that the pressure was uniform in part a (because the pad was small, or because the arithmetic would be easier?) underestimated the peak pressure. Modeling the pad as a one-dimensional springset is better, but the pad is really a three-dimensional continuum. A theory of elasticity approach or a finite element modeling may be overkill, given uncertainties inherent in this problem, but it still represents better modeling.

(d) To evaluate \bar{u} we need to evaluate two integrations

$$\begin{aligned} \int_0^c p(u)u \, du &= \int_0^1 3.396(1.6 + u)u \, du = 3.396(0.8 + 0.3333) = 3.849 \text{ lbf} \\ \int_0^c p(u) \, du &= \int_0^1 3.396(1.6 + u) \, du = 3.396(1.6 + 0.5) = 7.132 \text{ lbf/in} \end{aligned}$$

Thus $\bar{u} = 3.849/7.132 = 0.5397$ in. Then, from Eq. (f) of Sec. 16–1, the critical coefficient of friction is

$$\text{Answer} \quad f_{cr} \geq \frac{c + \bar{u}}{a} = \frac{1.6 + 0.5397}{4} = 0.535$$

The doorstep friction pad does not have a high enough coefficient of friction to make the doorstep a self-acting brake. The configuration must change and/or the pad material specification must be changed to sustain the function of a doorstep.

16-2 Internal Expanding Rim Clutches and Brakes

The internal-shoe rim clutch shown in Fig. 16-3 consists essentially of three elements: the mating frictional surface, the means of transmitting the torque to and from the surfaces, and the actuating mechanism. Depending upon the operating mechanism, such clutches are further classified as *expanding-ring*, *centrifugal*, *magnetic*, *hydraulic*, and *pneumatic*.

The expanding-ring clutch is often used in textile machinery, excavators, and machine tools where the clutch may be located within the driving pulley. Expanding-ring clutches benefit from centrifugal effects; transmit high torque, even at low speeds; and require both positive engagement and ample release force.

The centrifugal clutch is used mostly for automatic operation. If no spring is used, the torque transmitted is proportional to the square of the speed. This is particularly useful for electric-motor drives where, during starting, the driven machine comes up to speed without shock. Springs can also be used to prevent engagement until a certain motor speed is reached, but some shock may occur.

Magnetic clutches are particularly useful for automatic and remote-control systems. Such clutches are also useful in drives subject to complex load cycles (see Sec. 11-7).

Hydraulic and pneumatic clutches are also useful in drives having complex loading cycles and in automatic machinery, or in robots. Here the fluid flow can be controlled remotely using solenoid valves. These clutches are also available as disk, cone, and multiple-plate clutches.

In braking systems, the *internal-shoe* or *drum* brake is used mostly for automotive applications.

To analyze an internal-shoe device, refer to Fig. 16-4, which shows a shoe pivoted at point A, with the actuating force acting at the other end of the shoe. Since the shoe is long, we cannot make the assumption that the distribution of normal forces is uniform. The mechanical arrangement permits no pressure to be applied at the heel, and we will therefore assume the pressure at this point to be zero.

It is the usual practice to omit the friction material for a short distance away from the heel (point A). This eliminates interference, and the material would contribute little to the performance anyway, as will be shown. In some designs the hinge pin is made movable to provide additional heel pressure. This gives the effect of a floating shoe.

Figure 16-3

An internal expanding centrifugal-acting rim clutch.
(Courtesy of the Hilliard Corporation.)


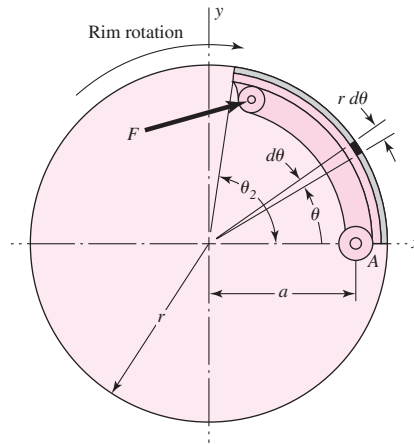
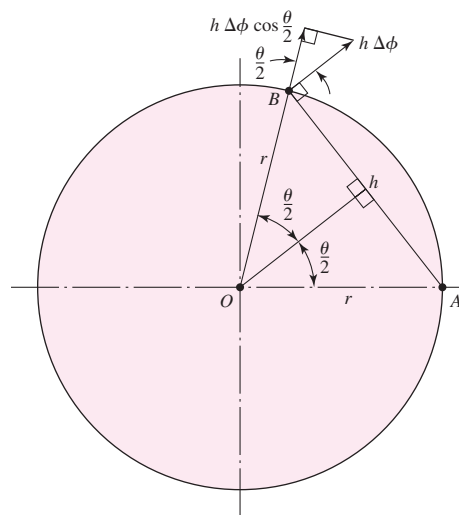


Figure 16-4

Internal friction shoe geometry.

**Figure 16-5**

The geometry associated with an arbitrary point on the shoe.



(Floating shoes will not be treated in this book, although their design follows the same general principles.)

Let us consider the pressure p acting upon an element of area of the frictional material located at an angle θ from the hinge pin (Fig. 16-4). We designate the maximum pressure p_a located at an angle θ_a from the hinge pin. To find the pressure distribution on the periphery of the internal shoe, consider point B on the shoe (Fig. 16-5). As in Ex. 16-1, if the shoe deforms by an infinitesimal rotation $\Delta\phi$ about the pivot point A , deformation perpendicular to AB is $h \Delta\phi$. From the isosceles triangle AOB , $h = 2r \sin(\theta/2)$, so

$$h \Delta\phi = 2r \Delta\phi \sin(\theta/2)$$

The deformation perpendicular to the rim is $h \Delta\phi \cos(\theta/2)$, which is

$$h \Delta\phi \cos(\theta/2) = 2r \Delta\phi \sin(\theta/2) \cos(\theta/2) = r \Delta\phi \sin \theta$$

Thus, the deformation, and consequently the pressure, is proportional to $\sin \theta$. In terms of the pressure at B and where the pressure is a maximum, this means

$$\frac{p}{\sin \theta} = \frac{p_a}{\sin \theta_a} \quad (a)$$

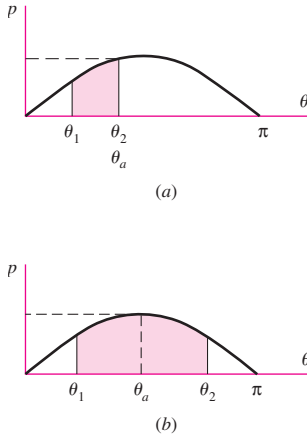


Figure 16-6

Defining the angle θ_a at which the maximum pressure p_a occurs when (a) shoe exists in zone $\theta_1 \leq \theta_2 \leq \pi/2$ and (b) shoe exists in zone $\theta_1 \leq \pi/2 \leq \theta_2$.

Rearranging gives

$$p = \frac{p_a}{\sin \theta_a} \sin \theta \quad (16-1)$$

This pressure distribution has interesting and useful characteristics:

- The pressure distribution is sinusoidal with respect to the angle θ .
- If the shoe is short, as shown in Fig. 16-6a, the largest pressure *on the shoe* is p_a occurring at the end of the shoe, θ_2 .
- If the shoe is long, as shown in Fig. 16-6b, the largest pressure on the shoe is p_a occurring at $\theta_a = 90^\circ$.

Since limitations on friction materials are expressed in terms of the largest allowable pressure on the lining, the designer wants to think in terms of p_a and not about the amplitude of the sinusoidal distribution that addresses locations off the shoe.

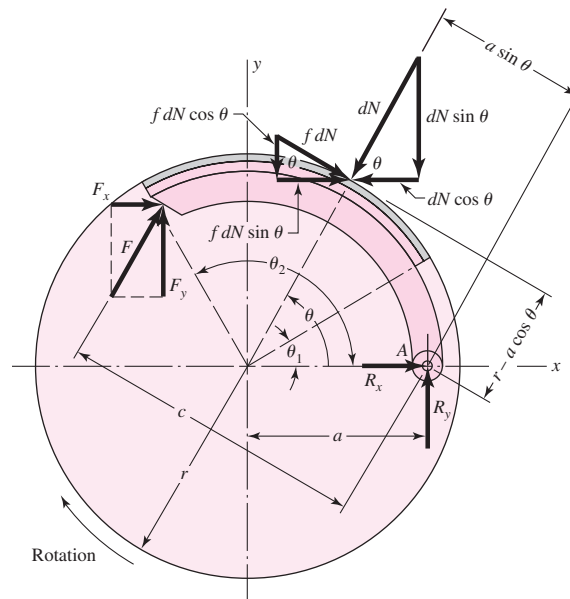
When $\theta = 0$, Eq. (16-1) shows that the pressure is zero. The frictional material located at the heel therefore contributes very little to the braking action and might as well be omitted. A good design would concentrate as much frictional material as possible in the neighborhood of the point of maximum pressure. Such a design is shown in Fig. 16-7. In this figure the frictional material begins at an angle θ_1 , measured from the hinge pin A, and ends at an angle θ_2 . Any arrangement such as this will give a good distribution of the frictional material.

Proceeding now (Fig. 16-7), the hinge-pin reactions are R_x and R_y . The actuating force F has components F_x and F_y and operates at distance c from the hinge pin. At any angle θ from the hinge pin there acts a differential normal force dN whose magnitude is

$$dN = pbr d\theta \quad (b)$$

Figure 16-7

Forces on the shoe.



where b is the face width (perpendicular to the paper) of the friction material. Substituting the value of the pressure from Eq. (16–1), the normal force is

$$dN = \frac{p_a b r \sin \theta d\theta}{\sin \theta_a} \quad (c)$$

The normal force dN has horizontal and vertical components $dN \cos \theta$ and $dN \sin \theta$, as shown in the figure. The frictional force $f dN$ has horizontal and vertical components whose magnitudes are $f dN \sin \theta$ and $f dN \cos \theta$, respectively. By applying the conditions of static equilibrium, we may find the actuating force F , the torque T , and the pin reactions R_x and R_y .

We shall find the actuating force F , using the condition that the summation of the moments about the hinge pin is zero. The frictional forces have a moment arm about the pin of $r - a \cos \theta$. The moment M_f of these frictional forces is

$$M_f = \int f dN (r - a \cos \theta) = \frac{f p_a b r}{\sin \theta_a} \int_{\theta_1}^{\theta_2} \sin \theta (r - a \cos \theta) d\theta \quad (16-2)$$

which is obtained by substituting the value of dN from Eq. (c). It is convenient to integrate Eq. (16–2) for each problem, and we shall therefore retain it in this form. The moment arm of the normal force dN about the pin is $a \sin \theta$. Designating the moment of the normal forces by M_N and summing these about the hinge pin give

$$M_N = \int dN (a \sin \theta) = \frac{p_a b r a}{\sin \theta_a} \int_{\theta_1}^{\theta_2} \sin^2 \theta d\theta \quad (16-3)$$

The actuating force F must balance these moments. Thus

$$F = \frac{M_N - M_f}{c} \quad (16-4)$$

We see here that a condition for zero actuating force exists. In other words, if we make $M_N = M_f$, self-locking is obtained, and no actuating force is required. This furnishes us with a method for obtaining the dimensions for some self-energizing action. Thus the dimension a in Fig. 16–7 must be such that

$$M_N > M_f \quad (16-5)$$

The torque T applied to the drum by the brake shoe is the sum of the frictional forces $f dN$ times the radius of the drum:

$$\begin{aligned} T &= \int f r dN = \frac{f p_a b r^2}{\sin \theta_a} \int_{\theta_1}^{\theta_2} \sin \theta d\theta \\ &= \frac{f p_a b r^2 (\cos \theta_1 - \cos \theta_2)}{\sin \theta_a} \end{aligned} \quad (16-6)$$

The hinge-pin reactions are found by taking a summation of the horizontal and vertical forces. Thus, for R_x , we have

$$\begin{aligned} R_x &= \int dN \cos \theta - \int f dN \sin \theta - F_x \\ &= \frac{p_a b r}{\sin \theta_a} \left(\int_{\theta_1}^{\theta_2} \sin \theta \cos \theta d\theta - f \int_{\theta_1}^{\theta_2} \sin^2 \theta d\theta \right) - F_x \end{aligned} \quad (d)$$

The vertical reaction is found in the same way:

$$\begin{aligned} R_y &= \int dN \sin \theta + \int f dN \cos \theta - F_y \\ &= \frac{p_a b r}{\sin \theta_a} \left(\int_{\theta_1}^{\theta_2} \sin^2 \theta d\theta + f \int_{\theta_1}^{\theta_2} \sin \theta \cos \theta d\theta \right) - F_y \end{aligned} \quad (e)$$

The direction of the frictional forces is reversed if the rotation is reversed. Thus, for counterclockwise rotation the actuating force is

$$F = \frac{M_N + M_f}{c} \quad (16-7)$$

and since both moments have the same sense, the self-energizing effect is lost. Also, for counterclockwise rotation the signs of the frictional terms in the equations for the pin reactions change, and Eqs. (d) and (e) become

$$R_x = \frac{p_a b r}{\sin \theta_a} \left(\int_{\theta_1}^{\theta_2} \sin \theta \cos \theta d\theta + f \int_{\theta_1}^{\theta_2} \sin^2 \theta d\theta \right) - F_x \quad (f)$$

$$R_y = \frac{p_a b r}{\sin \theta_a} \left(\int_{\theta_1}^{\theta_2} \sin^2 \theta d\theta - f \int_{\theta_1}^{\theta_2} \sin \theta \cos \theta d\theta \right) - F_y \quad (g)$$

Equations (d), (e), (f), and (g) can be simplified to ease computations. Thus, let

$$\begin{aligned} A &= \int_{\theta_1}^{\theta_2} \sin \theta \cos \theta d\theta = \left(\frac{1}{2} \sin^2 \theta \right)_{\theta_1}^{\theta_2} \\ B &= \int_{\theta_1}^{\theta_2} \sin^2 \theta d\theta = \left(\frac{\theta}{2} - \frac{1}{4} \sin 2\theta \right)_{\theta_1}^{\theta_2} \end{aligned} \quad (16-8)$$

Then, for clockwise rotation as shown in Fig. 16–7, the hinge-pin reactions are

$$\begin{aligned} R_x &= \frac{p_a b r}{\sin \theta_a} (A - fB) - F_x \\ R_y &= \frac{p_a b r}{\sin \theta_a} (B + fA) - F_y \end{aligned} \quad (16-9)$$

For counterclockwise rotation, Eqs. (f) and (g) become

$$\begin{aligned} R_x &= \frac{p_a b r}{\sin \theta_a} (A + fB) - F_x \\ R_y &= \frac{p_a b r}{\sin \theta_a} (B - fA) - F_y \end{aligned} \quad (16-10)$$

In using these equations, the reference system always has its origin at the center of the drum. The positive x axis is taken through the hinge pin. The positive y axis is always in the direction of the shoe, even if this should result in a left-handed system.

The following assumptions are implied by the preceding analysis:

- 1 The pressure at any point on the shoe is assumed to be proportional to the distance from the hinge pin, being zero at the heel. This should be considered from the standpoint that pressures specified by manufacturers are averages rather than maxima.

- 2 The effect of centrifugal force has been neglected. In the case of brakes, the shoes are not rotating, and no centrifugal force exists. In clutch design, the effect of this force must be considered in writing the equations of static equilibrium.
- 3 The shoe is assumed to be rigid. Since this cannot be true, some deflection will occur, depending upon the load, pressure, and stiffness of the shoe. The resulting pressure distribution may be different from that which has been assumed.
- 4 The entire analysis has been based upon a coefficient of friction that does not vary with pressure. Actually, the coefficient may vary with a number of conditions, including temperature, wear, and environment.

EXAMPLE 16-2

The brake shown in Fig. 16-8 is 300 mm in diameter and is actuated by a mechanism that exerts the same force F on each shoe. The shoes are identical and have a face width of 32 mm. The lining is a molded asbestos having a coefficient of friction of 0.32 and a pressure limitation of 1000 kPa. Estimate the maximum

- (a) Actuating force F .
- (b) Braking capacity.
- (c) Hinge-pin reactions.

Solution

(a) The right-hand shoe is self-energizing, and so the force F is found on the basis that the maximum pressure will occur on this shoe. Here $\theta_1 = 0^\circ$, $\theta_2 = 126^\circ$, $\theta_a = 90^\circ$, and $\sin \theta_a = 1$. Also,

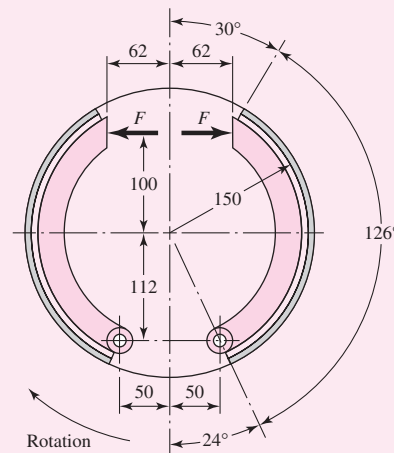
$$a = \sqrt{(112)^2 + (50)^2} = 122.7 \text{ mm}$$

Integrating Eq. (16-2) from 0 to θ_2 yields

$$\begin{aligned} M_f &= \frac{f p_a b r}{\sin \theta_a} \left[\left(-r \cos \theta \right)_0^{\theta_2} - a \left(\frac{1}{2} \sin^2 \theta \right)_0^{\theta_2} \right] \\ &= \frac{f p_a b r}{\sin \theta_a} \left(r - r \cos \theta_2 - \frac{a}{2} \sin^2 \theta_2 \right) \end{aligned}$$

Figure 16-8

Brake with internal expanding shoes; dimensions in millimeters.



Changing all lengths to meters, we have

$$\begin{aligned} M_f &= (0.32)[1000(10)^3](0.032)(0.150) \\ &\quad \times \left[0.150 - 0.150 \cos 126^\circ - \left(\frac{0.1227}{2} \right) \sin^2 126^\circ \right] \\ &= 304 \text{ N} \cdot \text{m} \end{aligned}$$

The moment of the normal forces is obtained from Eq. (16–3). Integrating from 0 to θ_2 gives

$$\begin{aligned} M_N &= \frac{p_a b r a}{\sin \theta_a} \left(\frac{\theta}{2} - \frac{1}{4} \sin 2\theta \right)_0^{\theta_2} \\ &= \frac{p_a b r a}{\sin \theta_a} \left(\frac{\theta_2}{2} - \frac{1}{4} \sin 2\theta_2 \right) \\ &= [1000(10)^3](0.032)(0.150)(0.1227) \left\{ \frac{\pi}{2} \frac{126}{180} - \frac{1}{4} \sin[(2)(126^\circ)] \right\} \\ &= 788 \text{ N} \cdot \text{m} \end{aligned}$$

From Eq. (16–4), the actuating force is

Answer
$$F = \frac{M_N - M_f}{c} = \frac{788 - 304}{100 + 112} = 2.28 \text{ kN}$$

(b) From Eq. (16–6), the torque applied by the right-hand shoe is

$$\begin{aligned} T_R &= \frac{f p_a b r^2 (\cos \theta_1 - \cos \theta_2)}{\sin \theta_a} \\ &= \frac{0.32[1000(10)^3](0.032)(0.150)^2 (\cos 0^\circ - \cos 126^\circ)}{\sin 90^\circ} = 366 \text{ N} \cdot \text{m} \end{aligned}$$

The torque contributed by the left-hand shoe cannot be obtained until we learn its maximum operating pressure. Equations (16–2) and (16–3) indicate that the frictional and normal moments are proportional to this pressure. Thus, for the left-hand shoe,

$$M_N = \frac{788 p_a}{1000} \quad M_f = \frac{304 p_a}{1000}$$

Then, from Eq. (16–7),

$$F = \frac{M_N + M_f}{c}$$

or

$$2.28 = \frac{(788/1000)p_a + (304/1000)p_a}{100 + 112}$$

Solving gives $p_a = 443 \text{ kPa}$. Then, from Eq. (16–6), the torque on the left-hand shoe is

$$T_L = \frac{f p_a b r^2 (\cos \theta_1 - \cos \theta_2)}{\sin \theta_a}$$

Since $\sin \theta_a = \sin 90^\circ = 1$, we have

$$T_L = 0.32[443(10)^3](0.032)(0.150)^2 (\cos 0^\circ - \cos 126^\circ) = 162 \text{ N} \cdot \text{m}$$

The braking capacity is the total torque:

Answer

$$T = T_R + T_L = 366 + 162 = 528 \text{ N} \cdot \text{m}$$

(c) In order to find the hinge-pin reactions, we note that $\sin \theta_a = 1$ and $\theta_1 = 0$. Then Eq. (16–8) gives

$$A = \frac{1}{2} \sin^2 \theta_2 = \frac{1}{2} \sin^2 126^\circ = 0.3273$$

$$B = \frac{\theta_2}{2} - \frac{1}{4} \sin 2\theta_2 = \frac{\pi(126)}{2(180)} - \frac{1}{4} \sin[(2)(126^\circ)] = 1.3373$$

Also, let

$$D = \frac{p_a b r}{\sin \theta_a} = \frac{1000(0.032)(0.150)}{1} = 4.8 \text{ kN}$$

where $p_a = 1000 \text{ kPa}$ for the right-hand shoe. Then, using Eq. (16–9), we have

$$\begin{aligned} R_x &= D(A - fB) - F_x = 4.8[0.3273 - 0.32(1.3373)] - 2.28 \sin 24^\circ \\ &= -1.410 \text{ kN} \end{aligned}$$

$$\begin{aligned} R_y &= D(B + fA) - F_y = 4.8[1.3373 + 0.32(0.3273)] - 2.28 \cos 24^\circ \\ &= 4.839 \text{ kN} \end{aligned}$$

The resultant on this hinge pin is

Answer

$$R = \sqrt{(-1.410)^2 + (4.839)^2} = 5.04 \text{ kN}$$

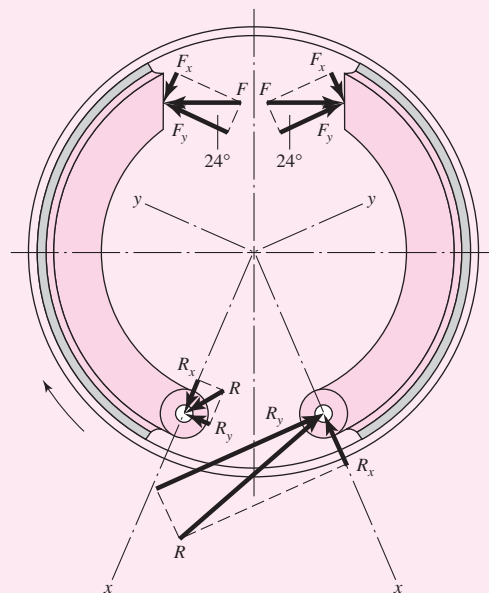
The reactions at the hinge pin of the left-hand shoe are found using Eqs. (16–10) for a pressure of 443 kPa . They are found to be $R_x = 0.678 \text{ kN}$ and $R_y = 0.538 \text{ kN}$. The resultant is

Answer

$$R = \sqrt{(0.678)^2 + (0.538)^2} = 0.866 \text{ kN}$$

The reactions for both hinge pins, together with their directions, are shown in Fig. 16–9.

Figure 16–9



This example dramatically shows the benefit to be gained by arranging the shoes to be self-energizing. If the left-hand shoe were turned over so as to place the hinge pin at the top, it could apply the same torque as the right-hand shoe. This would make the capacity of the brake $(2)(366) = 732 \text{ N} \cdot \text{m}$ instead of the present $528 \text{ N} \cdot \text{m}$, a 30 percent improvement. In addition, some of the friction material at the heel could be eliminated without seriously affecting the capacity, because of the low pressure in this area. This change might actually improve the overall design because the additional rim exposure would improve the heat-dissipation capacity.

16-3 External Contracting Rim Clutches and Brakes

The patented clutch-brake of Fig. 16-10 has external contracting friction elements, but the actuating mechanism is pneumatic. Here we shall study only pivoted external shoe brakes and clutches, though the methods presented can easily be adapted to the clutch-brake of Fig. 16-10.

Operating mechanisms can be classified as:

- 1 Solenoids
- 2 Levers, linkages, or toggle devices
- 3 Linkages with spring loading
- 4 Hydraulic and pneumatic devices

The static analysis required for these devices has already been covered in Sec. 3-1. The methods there apply to any mechanism system, including all those used in brakes and clutches. It is not necessary to repeat the material in Chap. 3 that applies directly to such mechanisms. Omitting the operating mechanisms from consideration allows us to concentrate on brake and clutch performance without the extraneous influences introduced by the need to analyze the statics of the control mechanisms.

The notation for external contracting shoes is shown in Fig. 16-11. The moments of the frictional and normal forces about the hinge pin are the same as for the internal

Figure 16-10

An external contracting clutch-brake that is engaged by expanding the flexible tube with compressed air. (Courtesy of Twin Disc Clutch Company.)


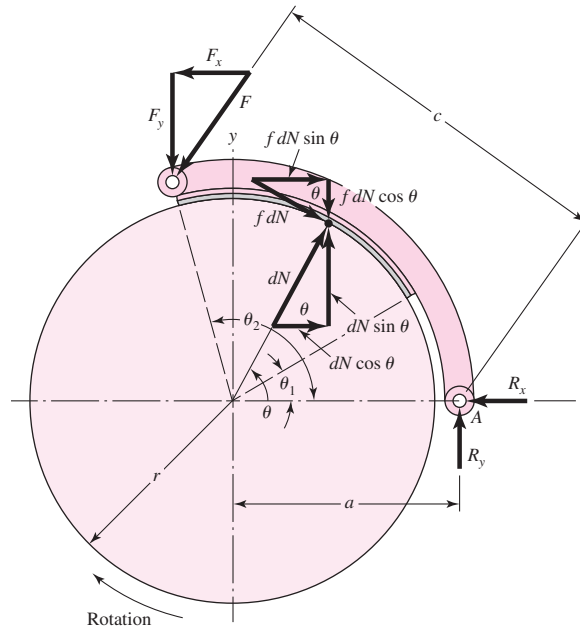


Figure 16-11

Notation of external
contacting shoes.



expanding shoes. Equations (16-2) and (16-3) apply and are repeated here for convenience:

$$M_f = \frac{f p_a b r}{\sin \theta_a} \int_{\theta_1}^{\theta_2} \sin \theta (r - a \cos \theta) d\theta \quad (16-2)$$

$$M_N = \frac{p_a b r a}{\sin \theta_a} \int_{\theta_1}^{\theta_2} \sin^2 \theta d\theta \quad (16-3)$$

Both these equations give positive values for clockwise moments (Fig. 16-11) when used for external contracting shoes. The actuating force must be large enough to balance both moments:

$$F = \frac{M_N + M_f}{c} \quad (16-11)$$

The horizontal and vertical reactions at the hinge pin are found in the same manner as for internal expanding shoes. They are

$$R_x = \int dN \cos \theta + \int f dN \sin \theta - F_x \quad (a)$$

$$R_y = \int f dN \cos \theta - \int dN \sin \theta + F_y \quad (b)$$

By using Eq. (16-8) and Eq. (c) from Sec. 16-2, we have

$$R_x = \frac{p_a b r}{\sin \theta_a} (A + f B) - F_x$$

$$R_y = \frac{p_a b r}{\sin \theta_a} (f A - B) + F_y \quad (16-12)$$

where K is a material constant, P is pressure, V is rim velocity, and t is time. Then, denoting P as $p(\theta)$ above and solving for $p(\theta)$ gives

$$p(\theta) = \frac{w(\theta)}{KVt} = \frac{w_0 \cos \theta}{KVt}$$

Since all elemental surface areas of the friction material see the same rubbing speed for the same duration, $w_0/(KVt)$ is a constant and

$$p(\theta) = (\text{constant}) \cos \theta = p_a \cos \theta \quad (c)$$

where p_a is the maximum value of $p(\theta)$.

Proceeding to the force analysis, we observe from Fig. 16–12a that

$$dN = pbr \, d\theta \quad (d)$$

or

$$dN = p_a br \cos \theta \, d\theta \quad (e)$$

The distance a to the pivot is chosen by finding where the moment of the frictional forces M_f is zero. First, this ensures that reaction R_y is at the correct location to establish symmetrical wear. Second, a cosinusoidal pressure distribution is sustained, preserving our predictive ability. Symmetry means $\theta_1 = \theta_2$, so

$$M_f = 2 \int_0^{\theta_2} (f \, dN)(a \cos \theta - r) = 0$$

Substituting Eq. (e) gives

$$2fp_a br \int_0^{\theta_2} (a \cos^2 \theta - r \cos \theta) \, d\theta = 0$$

from which

$$a = \frac{4r \sin \theta_2}{2\theta_2 + \sin 2\theta_2} \quad (16-15)$$

The distance a depends on the pressure distribution. Mislocating the pivot makes M_f zero about a different location, so the brake lining adjusts its local contact pressure, through wear, to compensate. The result is unsymmetrical wear, retiring the shoe lining, hence the shoe, sooner.

With the pivot located according to Eq. (16–15), the moment about the pin is zero, and the horizontal and vertical reactions are

$$R_x = 2 \int_0^{\theta_2} dN \cos \theta = \frac{p_a br}{2} (2\theta_2 + \sin 2\theta_2) \quad (16-16)$$

where, because of symmetry,

$$\int f \, dN \sin \theta = 0$$

Also,

$$R_y = 2 \int_0^{\theta_2} f \, dN \cos \theta = \frac{p_a br f}{2} (2\theta_2 + \sin 2\theta_2) \quad (16-17)$$

where

$$\int dN \sin \theta = 0$$

also because of symmetry. Note, too, that $R_x = -N$ and $R_y = -fN$, as might be expected for the particular choice of the dimension a . Therefore the torque is

$$T = afN \tag{16-18}$$

16-4 Band-Type Clutches and Brakes

Flexible clutch and brake bands are used in power excavators and in hoisting and other machinery. The analysis follows the notation of Fig. 16-13.

Because of friction and the rotation of the drum, the actuating force P_2 is less than the pin reaction P_1 . Any element of the band, of angular length $d\theta$, will be in equilibrium under the action of the forces shown in the figure. Summing these forces in the vertical direction, we have

$$(P + dP) \sin \frac{d\theta}{2} + P \sin \frac{d\theta}{2} - dN = 0 \tag{a}$$

$$dN = Pd\theta \tag{b}$$

since for small angles $\sin d\theta/2 = d\theta/2$. Summing the forces in the horizontal direction gives

$$(P + dP) \cos \frac{d\theta}{2} - P \cos \frac{d\theta}{2} - f dN = 0 \tag{c}$$

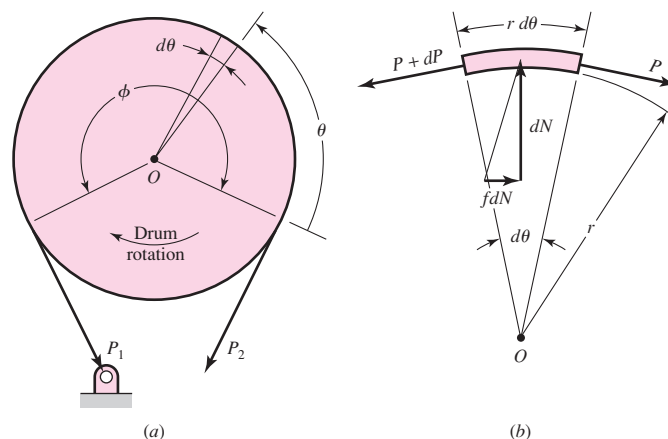
$$dP - f dN = 0 \tag{d}$$

since for small angles, $\cos(d\theta/2) \doteq 1$. Substituting the value of dN from Eq. (b) in (d) and integrating give

$$\int_{P_2}^{P_1} \frac{dP}{P} = f \int_0^\phi d\theta \quad \text{or} \quad \ln \frac{P_1}{P_2} = f\phi$$

Figure 16-13

Forces on a brake band.



and

$$\frac{P_1}{P_2} = e^{f\phi} \quad (16-19)$$

The torque may be obtained from the equation

$$T = (P_1 - P_2) \frac{D}{2} \quad (16-20)$$

The normal force dN acting on an element of area of width b and length $r d\theta$ is

$$dN = pbr d\theta \quad (e)$$

where p is the pressure. Substitution of the value of dN from Eq. (b) gives

$$P d\theta = pbr d\theta$$

Therefore

$$p = \frac{P}{br} = \frac{2P}{bD} \quad (16-21)$$

The pressure is therefore proportional to the tension in the band. The maximum pressure p_a will occur at the toe and has the value

$$p_a = \frac{2P_1}{bD} \quad (16-22)$$

16-5 Frictional-Contact Axial Clutches

An axial clutch is one in which the mating frictional members are moved in a direction parallel to the shaft. One of the earliest of these is the cone clutch, which is simple in construction and quite powerful. However, except for relatively simple installations, it has been largely displaced by the disk clutch employing one or more disks as the operating members. Advantages of the disk clutch include the freedom from centrifugal effects, the large frictional area that can be installed in a small space, the more effective heat-dissipation surfaces, and the favorable pressure distribution. Figure 16-14 shows a

Figure 16-14

Cross-sectional view of a single-plate clutch; A, driver; B, driven plate (keyed to driven shaft); C, actuator.

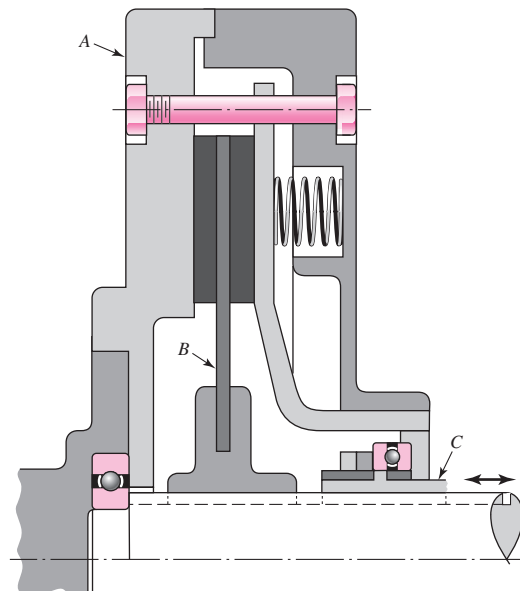


Figure 16-15

An oil-actuated multiple-disk clutch-brake for operation in an oil bath or spray. It is especially useful for rapid cycling. (Courtesy of Twin Disc Clutch Company.)


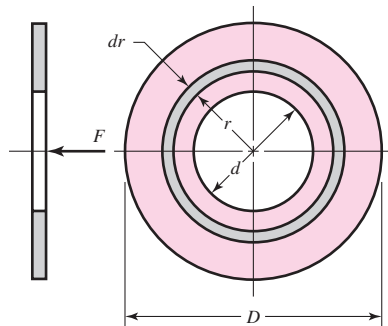


Figure 16-16

Disk friction member.



single-plate disk clutch; a multiple-disk clutch-brake is shown in Fig. 16–15. Let us now determine the capacity of such a clutch or brake in terms of the material and geometry.

Figure 16–16 shows a friction disk having an outside diameter D and an inside diameter d . We are interested in obtaining the axial force F necessary to produce a certain torque T and pressure p . Two methods of solving the problem, depending upon the construction of the clutch, are in general use. If the disks are rigid, then the greatest amount of wear will at first occur in the outer areas, since the work of friction is greater in those areas. After a certain amount of wear has taken place, the pressure distribution will change so as to permit the wear to be uniform. This is the basis of the first method of solution.

Another method of construction employs springs to obtain a uniform pressure over the area. It is this assumption of uniform pressure that is used in the second method of solution.

Uniform Wear

After initial wear has taken place and the disks have worn down to a point where uniform wear is established, the axial wear can be expressed by Eq. (12–27), p. 643, as

$$w = f_1 f_2 K P V t$$

in which only P and V vary from place to place in the rubbing surfaces. By definition uniform wear is constant from place to place; therefore,

$$\begin{aligned} PV &= (\text{constant}) = C_1 \\ pr\omega &= C_2 \\ pr &= C_3 = p_{\max}r_i = p_a r_i = p_a \frac{d}{2} \end{aligned} \quad (a)$$

We can take an expression from Eq. (a), which is the condition for having the same amount of work done at radius r as is done at radius $d/2$. Referring to Fig. 16–16, we have an element of area of radius r and thickness dr . The area of this element is $2\pi r dr$, so that the normal force acting upon this element is $dF = 2\pi pr dr$. We can find the total normal force by letting r vary from $d/2$ to $D/2$ and integrating. Thus, with pr constant,

$$F = \int_{d/2}^{D/2} 2\pi pr dr = \pi p_a d \int_{d/2}^{D/2} dr = \frac{\pi p_a d}{2} (D - d) \quad (16-23)$$

The torque is found by integrating the product of the frictional force and the radius:

$$T = \int_{d/2}^{D/2} 2\pi f p r^2 dr = \pi f p_a d \int_{d/2}^{D/2} r dr = \frac{\pi f p_a d}{8} (D^2 - d^2) \quad (16-24)$$

By substituting the value of F from Eq. (16–23) we may obtain a more convenient expression for the torque. Thus

$$T = \frac{Ff}{4} (D + d) \quad (16-25)$$

In use, Eq. (16–23) gives the actuating force for the selected maximum pressure p_a . This equation holds for any number of friction pairs or surfaces. Equation (16–25), however, gives the torque capacity for only a single friction surface.

Uniform Pressure

When uniform pressure can be assumed over the area of the disk, the actuating force F is simply the product of the pressure and the area. This gives

$$F = \frac{\pi p_a}{4} (D^2 - d^2) \quad (16-26)$$

As before, the torque is found by integrating the product of the frictional force and the radius:

$$T = 2\pi f p \int_{d/2}^{D/2} r^2 dr = \frac{\pi f p}{12} (D^3 - d^3) \quad (16-27)$$

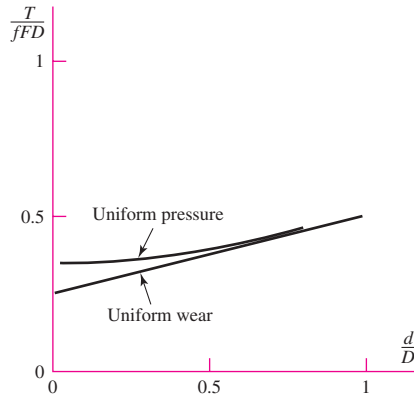
Since $p = p_a$, from Eq. (16–26) we can rewrite Eq. (16–27) as

$$T = \frac{Ff}{3} \frac{D^3 - d^3}{D^2 - d^2} \quad (16-28)$$

It should be noted for both equations that the torque is for a single pair of mating surfaces. This value must therefore be multiplied by the number of pairs of surfaces in contact.

Figure 16-17

Dimensionless plot of Eqs. (b) and (c).



Let us express Eq. (16-25) for torque during uniform wear as

$$\frac{T}{fFD} = \frac{1 + d/D}{4} \quad (b)$$

and Eq. (16-28) for torque during uniform pressure (new clutch) as

$$\frac{T}{fFD} = \frac{1}{3} \frac{1 - (d/D)^3}{1 - (d/D)^2} \quad (c)$$

and plot these in Fig. 16-17. What we see is a dimensionless presentation of Eqs. (b) and (c) which reduces the number of variables from five (T , f , F , D , and d) to three (T/FD , f , and d/D) which are dimensionless. This is the method of Buckingham. The dimensionless groups (called pi terms) are

$$\pi_1 = \frac{T}{FD} \quad \pi_2 = f \quad \pi_3 = \frac{d}{D}$$

This allows a five-dimensional space to be reduced to a three-dimensional space. Further, because of the “multiplicative” relation between f and T in Eqs. (b) and (c), it is possible to plot π_1/π_2 versus π_3 in a two-dimensional space (the plane of a sheet of paper) to view all cases over the domain of existence of Eqs. (b) and (c) and to compare, without risk of oversight! By examining Fig. 16-17 we can conclude that a new clutch, Eq. (b), always transmits more torque than an old clutch, Eq. (c). Furthermore, since clutches of this type are proportioned to make the diameter ratio d/D fall in the range $0.6 \leq d/D \leq 1$, the largest discrepancy between Eq. (b) and Eq. (c) will be

$$\frac{T}{fFD} = \frac{1 + 0.6}{4} = 0.400 \quad (\text{old clutch, uniform wear})$$

$$\frac{T}{fFD} = \frac{1}{3} \frac{1 - 0.6^3}{1 - 0.6^2} = 0.4083 \quad (\text{new clutch, uniform pressure})$$

so the proportional error is $(0.4083 - 0.400)/0.400 = 0.021$, or about 2 percent. Given the uncertainties in the actual coefficient of friction and the certainty that new clutches get old, there is little reason to use anything but Eqs. (16-23), (16-24), and (16-25).

16-6 Disk Brakes

As indicated in Fig. 16-16, there is no fundamental difference between a disk clutch and a disk brake. The analysis of the preceding section applies to disk brakes too.

We have seen that rim or drum brakes can be designed for self-energization. While this feature is important in reducing the braking effort required, it also has a disadvantage. When drum brakes are used as vehicle brakes, only a slight change in the coefficient of friction will cause a large change in the pedal force required for braking. A not unusual 30 percent reduction in the coefficient of friction due to a temperature change or moisture, for example, can result in a 50 percent change in the pedal force required to obtain the same braking torque obtainable prior to the change. The disk brake has no self-energization, and hence is not so susceptible to changes in the coefficient of friction.

Another type of disk brake is the *floating caliper brake*, shown in Fig. 16-18. The caliper supports a single floating piston actuated by hydraulic pressure. The action is much like that of a screw clamp, with the piston replacing the function of the screw. The floating action also compensates for wear and ensures a fairly constant pressure over the area of the friction pads. The seal and boot of Fig. 16-18 are designed to obtain clearance by backing off from the piston when the piston is released.

Caliper brakes (named for the nature of the actuating linkage) and disk brakes (named for the shape of the unlined surface) press friction material against the face(s)

Figure 16-18

An automotive disk brake.
(Courtesy DaimlerChrysler
Corporation.)

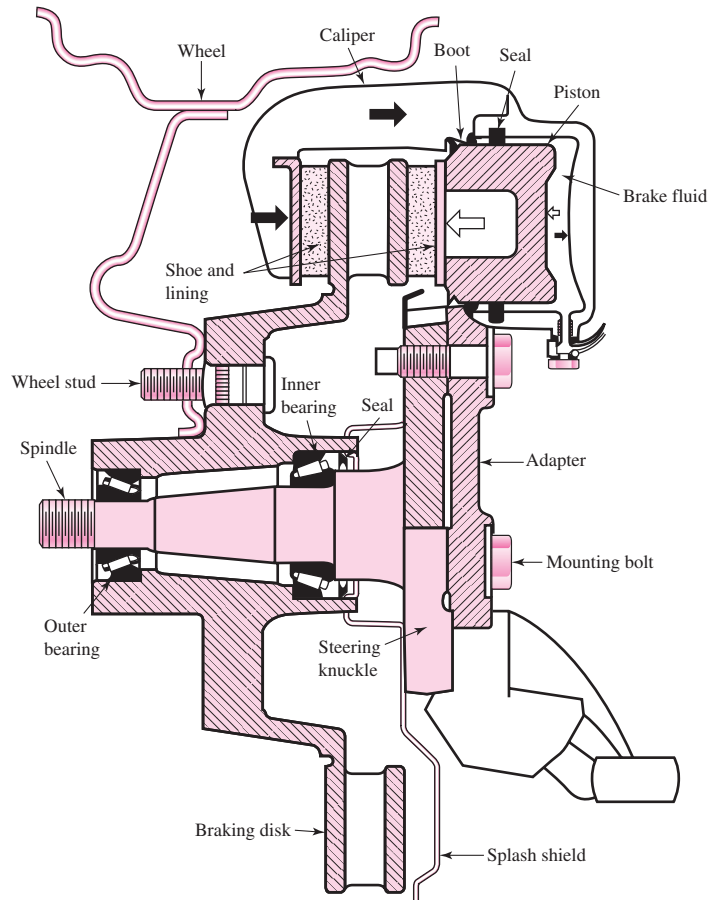
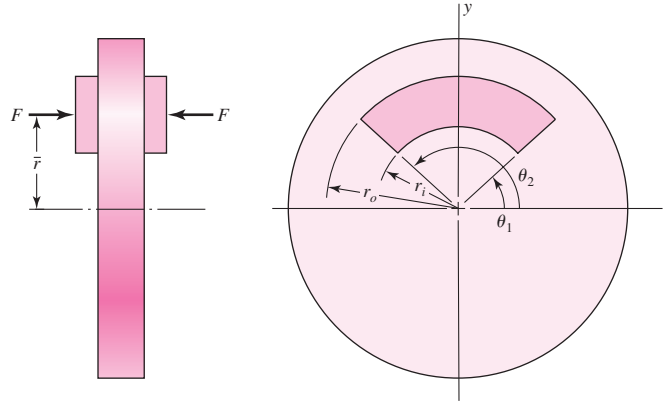


Figure 16-19

Geometry of contact area of an annular-pad segment of a caliper brake.



of a rotating disk. Depicted in Fig. 16–19 is the geometry of an annular-pad brake contact area. The governing axial wear equation is Eq. (12–27), p. 643,

$$w = f_1 f_2 K P V t$$

The coordinate \bar{r} locates the line of action of force F that intersects the y axis. Of interest also is the effective radius r_e , which is the radius of an equivalent shoe of infinitesimal radial thickness. If p is the local contact pressure, the actuating force F and the friction torque T are given by

$$F = \int_{\theta_1}^{\theta_2} \int_{r_i}^{r_o} p r \, dr \, d\theta = (\theta_2 - \theta_1) \int_{r_i}^{r_o} p r \, dr \quad (16-29)$$

$$T = \int_{\theta_1}^{\theta_2} \int_{r_i}^{r_o} f p r^2 \, dr \, d\theta = (\theta_2 - \theta_1) f \int_{r_i}^{r_o} p r^2 \, dr \quad (16-30)$$

The equivalent radius r_e can be found from $f F r_e = T$, or

$$r_e = \frac{T}{f F} = \frac{\int_{r_i}^{r_o} p r^2 \, dr}{\int_{r_i}^{r_o} p r \, dr} \quad (16-31)$$

The locating coordinate \bar{r} of the activating force is found by taking moments about the x axis:

$$M_x = F \bar{r} = \int_{\theta_1}^{\theta_2} \int_{r_i}^{r_o} p r (r \sin \theta) \, dr \, d\theta = (\cos \theta_1 - \cos \theta_2) \int_{r_i}^{r_o} p r^2 \, dr$$

$$\bar{r} = \frac{M_x}{F} = \frac{(\cos \theta_1 - \cos \theta_2)}{\theta_2 - \theta_1} r_e \quad (16-32)$$

Uniform Wear

It is clear from Eq. (12–27) that for the axial wear to be the same everywhere, the product PV must be a constant. From Eq. (a), Sec. 16–5, the pressure p can be expressed in terms of the largest allowable pressure p_a (which occurs at the inner radius r_i) as

$p = p_a r_i / r$. Equation (16–29) becomes

$$F = (\theta_2 - \theta_1) p_a r_i (r_o - r_i) \quad (16-33)$$

Equation (16–30) becomes

$$T = (\theta_2 - \theta_1) f p_a r_i \int_{r_i}^{r_o} r \, dr = \frac{1}{2} (\theta_2 - \theta_1) f p_a r_i (r_o^2 - r_i^2) \quad (16-34)$$

Equation (16–31) becomes

$$r_e = \frac{p_a r_i \int_{r_i}^{r_o} r \, dr}{p_a r_i \int_{r_i}^{r_o} dr} = \frac{r_o^2 - r_i^2}{2} \frac{1}{r_o - r_i} = \frac{r_o + r_i}{2} \quad (16-35)$$

Equation (16–32) becomes

$$\bar{r} = \frac{\cos \theta_1 - \cos \theta_2}{\theta_2 - \theta_1} \frac{r_o + r_i}{2} \quad (16-36)$$

Uniform Pressure

In this situation, approximated by a new brake, $p = p_a$. Equation (16–29) becomes

$$F = (\theta_2 - \theta_1) p_a \int_{r_i}^{r_o} r \, dr = \frac{1}{2} (\theta_2 - \theta_1) p_a (r_o^2 - r_i^2) \quad (16-37)$$

Equation (16–30) becomes

$$T = (\theta_2 - \theta_1) f p_a \int_{r_i}^{r_o} r^2 \, dr = \frac{1}{3} (\theta_2 - \theta_1) f p_a (r_o^3 - r_i^3) \quad (16-38)$$

Equation (16–31) becomes

$$r_e = \frac{p_a \int_{r_i}^{r_o} r^2 \, dr}{p_a \int_{r_i}^{r_o} r \, dr} = \frac{r_o^3 - r_i^3}{3} \frac{2}{r_o^2 - r_i^2} = \frac{2}{3} \frac{r_o^3 - r_i^3}{r_o^2 - r_i^2} \quad (16-39)$$

Equation (16–32) becomes

$$\bar{r} = \frac{\cos \theta_1 - \cos \theta_2}{\theta_2 - \theta_1} \frac{2}{3} \frac{r_o^3 - r_i^3}{r_o^2 - r_i^2} = \frac{2}{3} \frac{r_o^3 - r_i^3}{r_o^2 - r_i^2} \frac{\cos \theta_1 - \cos \theta_2}{\theta_2 - \theta_1} \quad (16-40)$$

EXAMPLE 16-3

Two annular pads, $r_i = 3.875$ in, $r_o = 5.50$ in, subtend an angle of 108° , have a coefficient of friction of 0.37, and are actuated by a pair of hydraulic cylinders 1.5 in in diameter. The torque requirement is 13 000 lbf · in. For uniform wear

- Find the largest normal pressure p_a .
- Estimate the actuating force F .
- Find the equivalent radius r_e and force location \bar{r} .
- Estimate the required hydraulic pressure.

832 Mechanical Engineering Design

Solution (a) From Eq. (16–34), with $T = 13\,000/2 = 6500$ lbf · in for each pad,

$$\begin{aligned} \text{Answer } p_a &= \frac{2T}{(\theta_2 - \theta_1) f r_i (r_o^2 - r_i^2)} \\ &= \frac{2(6500)}{(144^\circ - 36^\circ)(\pi/180)0.37(3.875)(5.5^2 - 3.875^2)} = 315.8 \text{ psi} \end{aligned}$$

(b) From Eq. (16–33),

$$\begin{aligned} \text{Answer } F &= (\theta_2 - \theta_1) p_a r_i (r_o - r_i) = (144^\circ - 36^\circ)(\pi/180)315.8(3.875)(5.5 - 3.875) \\ &= 3748 \text{ lbf} \end{aligned}$$

(c) From Eq. (16–35),

$$\text{Answer } r_e = \frac{r_o + r_i}{2} = \frac{5.50 + 3.875}{2} = 4.688 \text{ in}$$

From Eq. (16–36),

$$\begin{aligned} \text{Answer } \bar{r} &= \frac{\cos \theta_1 - \cos \theta_2}{\theta_2 - \theta_1} \frac{r_o + r_i}{2} = \frac{\cos 36^\circ - \cos 144^\circ}{(144^\circ - 36^\circ)(\pi/180)} \frac{5.50 + 3.875}{2} \\ &= 4.024 \text{ in} \end{aligned}$$

(d) Each cylinder supplies the actuating force, 3748 lbf.

$$\text{Answer } p_{\text{hydraulic}} = \frac{F}{A_p} = \frac{3748}{\pi(1.5^2/4)} = 2121 \text{ psi}$$

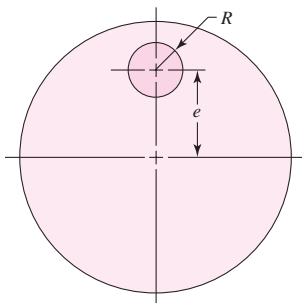


Figure 16-20

Geometry of circular pad of a caliper brake.

Circular (Button or Puck) Pad Caliper Brake

Figure 16–20 displays the pad geometry. Numerical integration is necessary to analyze this brake since the boundaries are difficult to handle in closed form. Table 16–1 gives the parameters for this brake as determined by Fazekas. The effective radius is given by

$$r_e = \delta e \quad (16-41)$$

The actuating force is given by

$$F = \pi R^2 p_{\text{av}} \quad (16-42)$$

and the torque is given by

$$T = f F r_e \quad (16-43)$$

Table 16-1

Parameters for a
Circular-Pad Caliper
Brake

Source: G. A. Fazekas, "On
Circular Spot Brakes," *Trans.
ASME, J. Engineering for
Industry*, vol. 94, Series B,
No. 3, August 1972,
pp. 859–863.

$\frac{R}{e}$	$\delta = \frac{r_e}{e}$	$\frac{p_{\max}}{p_{\text{av}}}$
0.0	1.000	1.000
0.1	0.983	1.093
0.2	0.969	1.212
0.3	0.957	1.367
0.4	0.947	1.578
0.5	0.938	1.875

EXAMPLE 16-4

A button-pad disk brake uses dry sintered metal pads. The pad radius is $\frac{1}{2}$ in, and its center is 2 in from the axis of rotation of the $3\frac{1}{2}$ -in-diameter disk. Using half of the largest allowable pressure, $p_{\max} = 350$ psi, find the actuating force and the brake torque. The coefficient of friction is 0.31.

Solution Since the pad radius $R = 0.5$ in and eccentricity $e = 2$ in,

$$\frac{R}{e} = \frac{0.5}{2} = 0.25$$

From Table 16-1, by interpolation, $\delta = 0.963$ and $p_{\max}/p_{\text{av}} = 1.290$. It follows that the effective radius e is found from Eq. (16-41):

$$r_e = \delta e = 0.963(2) = 1.926 \text{ in}$$

and the average pressure is

$$p_{\text{av}} = \frac{p_{\max}/2}{1.290} = \frac{350/2}{1.290} = 135.7 \text{ psi}$$

The actuating force F is found from Eq. (16-42) to be

$$\text{Answer} \quad F = \pi R^2 p_{\text{av}} = \pi (0.5)^2 135.7 = 106.6 \text{ lbf} \quad (\text{one side})$$

The brake torque T is

$$\text{Answer} \quad T = f F r_e = 0.31(106.6)1.926 = 63.65 \text{ lbf} \cdot \text{in} \quad (\text{one side})$$

16-7 Cone Clutches and Brakes

The drawing of a *cone clutch* in Fig. 16-21 shows that it consists of a *cup* keyed or splined to one of the shafts, a *cone* that must slide axially on splines or keys on the mating shaft, and a helical *spring* to hold the clutch in engagement. The clutch is disengaged by means of a fork that fits into the shifting groove on the friction cone. The *cone angle* α and the diameter and face width of the cone are the important geometric design parameters. If the

Figure 16-21

Cross section of a cone clutch.

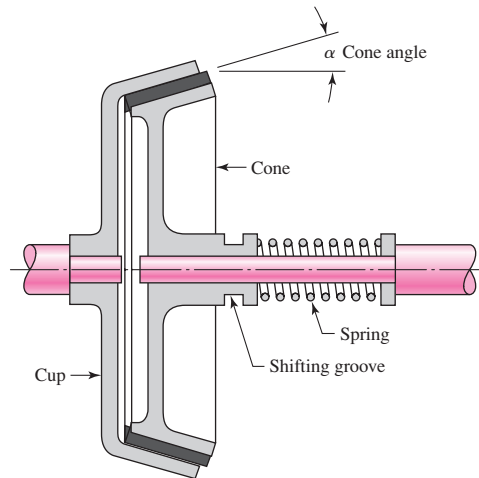
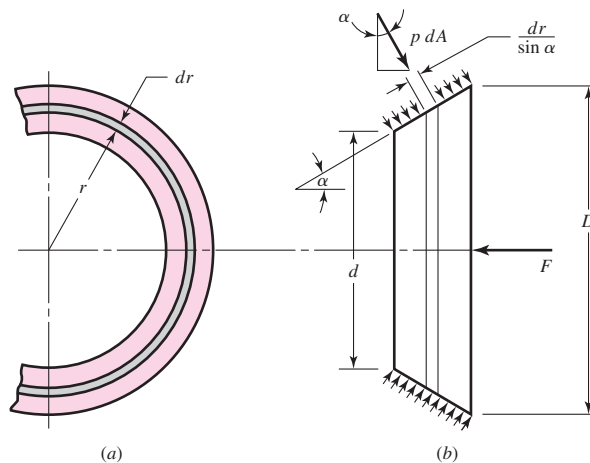


Figure 16-22

Contact area of a cone clutch.



cone angle is too small, say, less than about 8° , then the force required to disengage the clutch may be quite large. And the wedging effect lessens rapidly when larger cone angles are used. Depending upon the characteristics of the friction materials, a good compromise can usually be found using cone angles between 10 and 15° .

To find a relation between the operating force F and the torque transmitted, designate the dimensions of the friction cone as shown in Figure 16-22. As in the case of the axial clutch, we can obtain one set of relations for a uniform-wear and another set for a uniform-pressure assumption.

Uniform Wear

The pressure relation is the same as for the axial clutch:

$$p = p_a \frac{d}{2r} \quad (a)$$

Next, referring to Fig. 16-22, we see that we have an element of area dA of radius r and width $dr/\sin \alpha$. Thus $dA = (2\pi r dr)/\sin \alpha$. As shown in Fig. 16-22, the operating

force will be the integral of the axial component of the differential force $p dA$. Thus

$$\begin{aligned} F &= \int p dA \sin \alpha = \int_{d/2}^{D/2} \left(p_a \frac{d}{2r} \right) \left(\frac{2\pi r dr}{\sin \alpha} \right) (\sin \alpha) \\ &= \pi p_a d \int_{d/2}^{D/2} dr = \frac{\pi p_a d}{2} (D - d) \end{aligned} \quad (16-44)$$

which is the same result as in Eq. (16-23).

The differential friction force is $fp dA$, and the torque is the integral of the product of this force with the radius. Thus

$$\begin{aligned} T &= \int rfp dA = \int_{d/2}^{D/2} (rf) \left(p_a \frac{d}{2r} \right) \left(\frac{2\pi r dr}{\sin \alpha} \right) \\ &= \frac{\pi f p_a d}{\sin \alpha} \int_{d/2}^{D/2} r dr = \frac{\pi f p_a d}{8 \sin \alpha} (D^2 - d^2) \end{aligned} \quad (16-45)$$

Note that Eq. (16-24) is a special case of Eq. (16-45), with $\alpha = 90^\circ$. Using Eq. (16-44), we find that the torque can also be written

$$T = \frac{Ff}{4 \sin \alpha} (D + d) \quad (16-46)$$

Uniform Pressure

Using $p = p_a$, the actuating force is found to be

$$F = \int p_a dA \sin \alpha = \int_{d/2}^{D/2} (p_a) \left(\frac{2\pi r dr}{\sin \alpha} \right) (\sin \alpha) = \frac{\pi p_a}{4} (D^2 - d^2) \quad (16-47)$$

The torque is

$$T = \int rfp_a dA = \int_{d/2}^{D/2} (rfp_a) \left(\frac{2\pi r dr}{\sin \alpha} \right) = \frac{\pi f p_a}{12 \sin \alpha} (D^3 - d^3) \quad (16-48)$$

Using Eq. (16-47) in Eq. (16-48) gives

$$T = \frac{Ff}{3 \sin \alpha} \frac{D^3 - d^3}{D^2 - d^2} \quad (16-49)$$

As in the case of the axial clutch, we can write Eq. (16-46) dimensionlessly as

$$\frac{T \sin \alpha}{fFd} = \frac{1 + d/D}{4} \quad (b)$$

and write Eq. (16-49) as

$$\frac{T \sin \alpha}{fFd} = \frac{1}{3} \frac{1 - (d/D)^3}{1 - (d/D)^2} \quad (c)$$

This time there are six (T , α , f , F , D , and d) parameters and four pi terms:

$$\pi_1 = \frac{T}{FD} \quad \pi_2 = f \quad \pi_3 = \sin \alpha \quad \pi_4 = \frac{d}{D}$$

As in Fig. 16-17, we plot $T \sin \alpha / (fFD)$ as ordinate and d/D as abscissa. The plots and conclusions are the same. There is little reason for using equations other than Eqs. (16-44), (16-45), and (16-46).

16–8 Energy Considerations

When the rotating members of a machine are caused to stop by means of a brake, the kinetic energy of rotation must be absorbed by the brake. This energy appears in the brake in the form of heat. In the same way, when the members of a machine that are initially at rest are brought up to speed, slipping must occur in the clutch until the driven members have the same speed as the driver. Kinetic energy is absorbed during slippage of either a clutch or a brake, and this energy appears as heat.

We have seen how the torque capacity of a clutch or brake depends upon the coefficient of friction of the material and upon a safe normal pressure. However, the character of the load may be such that, if this torque value is permitted, the clutch or brake may be destroyed by its own generated heat. The capacity of a clutch is therefore limited by two factors, the characteristics of the material and the ability of the clutch to dissipate heat. In this section we shall consider the amount of heat generated by a clutching or braking operation. If the heat is generated faster than it is dissipated, we have a temperature-rise problem; that is the subject of the next section.

To get a clear picture of what happens during a simple clutching or braking operation, refer to Fig. 16–1*a*, which is a mathematical model of a two-inertia system connected by a clutch. As shown, inertias I_1 and I_2 have initial angular velocities of ω_1 and ω_2 , respectively. During the clutch operation both angular velocities change and eventually become equal. We assume that the two shafts are rigid and that the clutch torque is constant.

Writing the equation of motion for inertia 1 gives

$$I_1 \ddot{\theta}_1 = -T \quad (a)$$

where $\ddot{\theta}_1$ is the angular acceleration of I_1 and T is the clutch torque. A similar equation for I_2 is

$$I_2 \ddot{\theta}_2 = T \quad (b)$$

We can determine the instantaneous angular velocities $\dot{\theta}_1$ and $\dot{\theta}_2$ of I_1 and I_2 after any period of time t has elapsed by integrating Eqs. (a) and (b). The results are

$$\dot{\theta}_1 = -\frac{T}{I_1}t + \omega_1 \quad (c)$$

$$\dot{\theta}_2 = \frac{T}{I_2}t + \omega_2 \quad (d)$$

where $\dot{\theta}_1 = \omega_1$ and $\dot{\theta}_2 = \omega_2$ at $t = 0$. The difference in the velocities, sometimes called the relative velocity, is

$$\begin{aligned} \dot{\theta} &= \dot{\theta}_1 - \dot{\theta}_2 = -\frac{T}{I_1}t + \omega_1 - \left(\frac{T}{I_2}t + \omega_2\right) \\ &= \omega_1 - \omega_2 - T \left(\frac{I_1 + I_2}{I_1 I_2}\right)t \end{aligned} \quad (16-50)$$

The clutching operation is completed at the instant in which the two angular velocities $\dot{\theta}_1$ and $\dot{\theta}_2$ become equal. Let the time required for the entire operation be t_1 . Then $\dot{\theta} = 0$ when $\dot{\theta}_1 = \dot{\theta}_2$, and so Eq. (16–50) gives the time as

$$t_1 = \frac{I_1 I_2 (\omega_1 - \omega_2)}{T (I_1 + I_2)} \quad (16-51)$$

This equation shows that the time required for the engagement operation is directly proportional to the velocity difference and inversely proportional to the torque.

We have assumed the clutch torque to be constant. Therefore, using Eq. (16–50), we find the rate of energy-dissipation during the clutching operation to be

$$u = T\dot{\theta} = T \left[\omega_1 - \omega_2 - T \left(\frac{I_1 + I_2}{I_1 I_2} \right) t \right] \quad (e)$$

This equation shows that the energy-dissipation rate is greatest at the start, when $t = 0$.

The total energy dissipated during the clutching operation or braking cycle is obtained by integrating Eq. (e) from $t = 0$ to $t = t_1$. The result is found to be

$$\begin{aligned} E &= \int_0^{t_1} u \, dt = T \int_0^{t_1} \left[\omega_1 - \omega_2 - T \left(\frac{I_1 + I_2}{I_1 I_2} \right) t \right] dt \\ &= \frac{I_1 I_2 (\omega_1 - \omega_2)^2}{2(I_1 + I_2)} \end{aligned} \quad (16-52)$$

where Eq. (16–51) was employed. Note that the energy dissipated is proportional to the velocity difference squared and is independent of the clutch torque.

Note that E in Eq. (16–52) is the energy lost or dissipated; this is the energy that is absorbed by the clutch or brake. If the inertias are expressed in U.S. customary units ($\text{lb} \cdot \text{in} \cdot \text{s}^2$), then the energy absorbed by the clutch assembly is in $\text{in} \cdot \text{lb}$. Using these units, the heat generated in Btu is

$$H = \frac{E}{9336} \quad (16-53)$$

In SI, the inertias are expressed in kilogram-meter² units, and the energy dissipated is expressed in joules.

16–9 Temperature Rise

The temperature rise of the clutch or brake assembly can be approximated by the classic expression

$$\Delta T = \frac{H}{C_p W} \quad (16-54)$$

where ΔT = temperature rise, °F

C_p = specific heat capacity, Btu/($\text{lb}_m \cdot \text{°F}$); use 0.12 for steel or cast iron

W = mass of clutch or brake parts, lbm

A similar equation can be written for SI units. It is

$$\Delta T = \frac{E}{C_p m} \quad (16-55)$$

where ΔT = temperature rise, °C

C_p = specific heat capacity; use 500 J/kg · °C for steel or cast iron

m = mass of clutch or brake parts, kg

The temperature-rise equations above can be used to explain what happens when a clutch or brake is operated. However, there are so many variables involved that it would

be most unlikely that such an analysis would even approximate experimental results. For this reason such analyses are most useful, for repetitive cycling, in pinpointing those design parameters that have the greatest effect on performance.

If an object is at initial temperature T_1 in an environment of temperature T_∞ , then Newton's cooling model is expressed as

$$\frac{T - T_\infty}{T_1 - T_\infty} = \exp\left(-\frac{\dot{h}_{CR}A}{WC_p}t\right) \quad (16-56)$$

- where
- T = temperature at time t , °F
 - T_1 = initial temperature, °F
 - T_∞ = environmental temperature, °F
 - \dot{h}_{CR} = overall coefficient of heat transfer, Btu/(in² · s · °F)
 - A = lateral surface area, in²
 - W = mass of the object, lbm
 - C_p = specific heat capacity of the object, Btu/(lbm · °F)

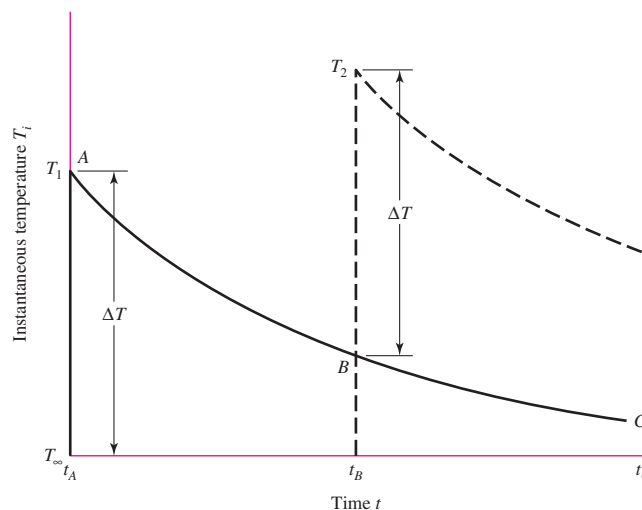
Figure 16–23 shows an application of Eq. (16–56). The curve ABC is the exponential decline of temperature given by Eq. (16–56). At time t_B a second application of the brake occurs. The temperature quickly rises to temperature T_2 , and a new cooling curve is started. For repetitive brake applications, subsequent temperature peaks T_3, T_4, \dots , occur until the brake is able to dissipate by cooling between operations an amount of heat equal to the energy absorbed in the application. If this is a production situation with brake applications every t_1 seconds, then a steady state develops in which all the peaks T_{max} and all the valleys T_{min} are repetitive.

The heat-dissipation capacity of disk brakes has to be planned to avoid reaching the temperatures of disk and pad that are detrimental to the parts. When a disk brake has a rhythm such as discussed above, then the rate of heat transfer is described by another Newtonian equation:

$$H_{loss} = \dot{h}_{CR}A(T - T_\infty) = (h_r + f_v h_c)A(T - T_\infty) \quad (16-57)$$

Figure 16–23

The effect of clutching or braking operations on temperature. T_∞ is the ambient temperature. Note that the temperature rise ΔT may be different for each operation.



where H_{loss} = rate of energy loss, Btu/s

\dot{h}_{CR} = overall coefficient of heat transfer, Btu/(in² · s · °F)

h_r = radiation component of \dot{h}_{CR} , Btu/(in² · s · °F), Fig. 16–24a

h_c = convective component of \dot{h}_{CR} , Btu/(in² · s · °F), Fig. 16–24a

f_v = ventilation factor, Fig. 16–24b

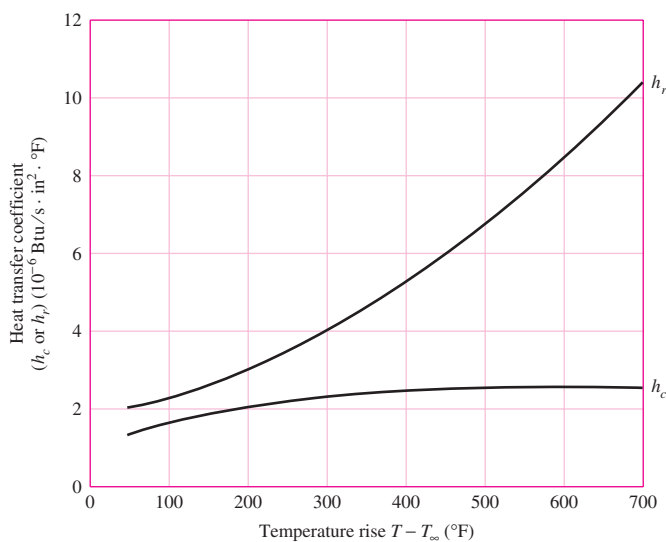
T = disk temperature, °F

T_{∞} = ambient temperature, °F

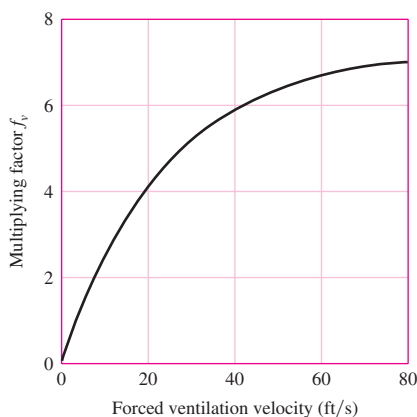
The energy E absorbed by the brake stopping an equivalent rotary inertia I in terms of original and final angular velocities ω_o and ω_f is given by Eq. (16–53) with $I_1 = I$

Figure 16–24

(a) Heat-transfer coefficient in still air. (b) Ventilation factors.
(Courtesy of Tolo-o-matic.)



(a)



(b)

and $I_2 = 0$,

$$E = \frac{1}{2} \frac{I}{9336} (\omega_o^2 - \omega_f^2) \quad (16-58)$$

in Btu. The temperature rise ΔT due to a single stop is

$$\Delta T = \frac{E}{WC} \quad (16-59)$$

T_{\max} has to be high enough to transfer E Btu in t_1 seconds. For steady state, rearrange Eq. (16-56) as

$$\frac{T_{\min} - T_{\infty}}{T_{\max} - T_{\infty}} = \exp(-\beta t_1)$$

where $\beta = \dot{h}_{\text{CR}}A/(WC_p)$. Cross-multiply, add T_{\max} to both sides, set $T_{\max} - T_{\min} = \Delta T$, and rearrange, obtaining

$$T_{\max} = T_{\infty} + \frac{\Delta T}{1 - \exp(-\beta t_1)} \quad (16-60)$$

EXAMPLE 16-5

A caliper brake is used 24 times per hour to arrest a machine shaft from a speed of 250 rev/min to rest. The ventilation of the brake provides a mean air speed of 25 ft/s. The equivalent rotary inertia of the machine as seen from the brake shaft is 289 lbm · in · s. The disk is steel with a density $\gamma = 0.282$ lbm/in³, a specific heat capacity of 0.108 Btu/(lbm · °F), a diameter of 6 in, a thickness of $\frac{1}{4}$ in. The pads are dry sintered metal. The lateral area of the brake surface is 50 in². Find T_{\max} and T_{\min} for the steady-state operation.

Solution

$$t_1 = 60^2/24 = 150 \text{ s}$$

Assuming a temperature rise of $T_{\max} - T_{\infty} = 200^\circ\text{F}$, from Fig. 16-24a,

$$h_r = 3.0(10^{-6}) \text{ Btu}/(\text{in}^2 \cdot \text{s} \cdot ^\circ\text{F})$$

$$h_c = 2.0(10^{-6}) \text{ Btu}/(\text{in}^2 \cdot \text{s} \cdot ^\circ\text{F})$$

Fig. 16-24b:

$$f_v = 4.8$$

$$\dot{h}_{\text{CR}} = h_r + f_v h_c = 3.0(10^{-6}) + 4.8(2.0)10^{-6} = 12.6(10^{-6}) \text{ Btu}/(\text{in}^2 \cdot \text{s} \cdot ^\circ\text{F})$$

The mass of the disk is

$$W = \frac{\pi \gamma D^2 h}{4} = \frac{\pi (0.282) 6^2 (0.25)}{4} = 1.99 \text{ lbm}$$

$$\text{Eq. (16-58): } E = \frac{1}{2} \frac{I}{9336} (\omega_o^2 - \omega_f^2) = \frac{289}{2(9336)} \left(\frac{2\pi}{60} 250 \right)^2 = 10.6 \text{ Btu}$$

$$\beta = \frac{\dot{h}_{\text{CR}}A}{WC_p} = \frac{12.6(10^{-6})50}{1.99(0.108)} = 2.93(10^{-3}) \text{ s}^{-1}$$

$$\text{Eq. (16-59):} \quad \Delta T = \frac{E}{WC_p} = \frac{10.6}{1.99(0.108)} = 49.3^\circ\text{F}$$

$$\text{Answer Eq. (16-60):} \quad T_{\max} = 70 + \frac{49.3}{1 - \exp[-2.93(10^{-3})150]} = 209^\circ\text{F}$$

$$\text{Answer} \quad T_{\min} = 209 - 49.3 = 160^\circ\text{F}$$

The predicted temperature rise here is $T_{\max} - T_{\infty} = 139^\circ\text{F}$. Iterating with revised values of h_r and h_c from Fig. 16-24a, we can make the solution converge to $T_{\max} = 220^\circ\text{F}$ and $T_{\min} = 171^\circ\text{F}$.

Table 16-3 for dry sintered metal pads gives a continuous operating maximum temperature of 570–660°F. There is no danger of overheating.

16-10 Friction Materials

A brake or friction clutch should have the following lining material characteristics to a degree that is dependent on the severity of service:

- High and reproducible coefficient of friction
- Imperviousness to environmental conditions, such as moisture
- The ability to withstand high temperatures, together with good thermal conductivity and diffusivity, as well as high specific heat capacity
- Good resiliency
- High resistance to wear, scoring, and galling
- Compatible with the environment
- Flexibility

Table 16-2 gives area of friction surface required for several braking powers. Table 16-3 gives important characteristics of some friction materials for brakes and clutches.

Table 16-2

Area of Friction Material Required for a Given Average Braking Power Sources: M. J. Neale, *The Tribology Handbook*, Butterworth, London, 1973; *Friction Materials for Engineers*, Ferodo Ltd., Chapelen-le-frith, England, 1968.

Duty Cycle	Typical Applications	Ratio of Area to Average Braking Power, in ² /(Btu/s)		
		Band and Drum Brakes	Plate Disk Brakes	Caliper Disk Brakes
Infrequent	Emergency brakes	0.85	2.8	0.28
Intermittent	Elevators, cranes, and winches	2.8	7.1	0.70
Heavy-duty	Excavators, presses	5.6–6.9	13.6	1.41

Table 16-3

Characteristics of Friction Materials for Brakes and Clutches Sources: Ferodo Ltd., Chapel-en-le-frith, England; Scam-pac, Mequon, Wis.; Raybestos, New York, N.Y. and Stratford, Conn.; Gafke Corp., Chicago, Ill.; General Metals Powder Co., Akron, Ohio; D. A. B. Industries, Troy, Mich.; Friction Products Co., Medina, Ohio.

Material	Friction Coefficient f	Maximum Pressure P_{\max} , psi	Maximum Temperature Instantaneous, °F	Maximum Temperature Continuous, °F	Maximum Velocity V_{\max} , ft/min	Applications
Cermet	0.32	150	1500	750		Brakes and clutches
Sintered metal (dry)	0.29–0.33	300–400	930–1020	570–660	3600	Clutches and caliper disk brakes
Sintered metal (wet)	0.06–0.08	500	930	570	3600	Clutches
Rigid molded asbestos (dry)	0.35–0.41	100	660–750	350	3600	Drum brakes and clutches
Rigid molded asbestos (wet)	0.06	300	660	350	3600	Industrial clutches
Rigid molded asbestos pads	0.31–0.49	750	930–1380	440–660	4800	Disk brakes
Rigid molded nonasbestos	0.33–0.63	100–150		500–750	4800–7500	Clutches and brakes
Semirigid molded asbestos	0.37–0.41	100	660	300	3600	Clutches and brakes
Flexible molded asbestos	0.39–0.45	100	660–750	300–350	3600	Clutches and brakes
Wound asbestos yarn and wire	0.38	100	660	300	3600	Vehicle clutches
Woven asbestos yarn and wire	0.38	100	500	260	3600	Industrial clutches and brakes
Woven cotton	0.47	100	230	170	3600	Industrial clutches and brakes
Resilient paper (wet)	0.09–0.15	400	300		$PV < 500\,000$ psi · ft/min	Clutches and transmission bands

The manufacture of friction materials is a highly specialized process, and it is advisable to consult manufacturers' catalogs and handbooks, as well as manufacturers directly, in selecting friction materials for specific applications. Selection involves a consideration of the many characteristics as well as the standard sizes available.

The *woven-cotton lining* is produced as a fabric belt that is impregnated with resins and polymerized. It is used mostly in heavy machinery and is usually supplied in rolls up to 50 ft in length. Thicknesses available range from $\frac{1}{8}$ to 1 in, in widths up to about 12 in.

A *woven-asbestos lining* is made in a similar manner to the cotton lining and may also contain metal particles. It is not quite as flexible as the cotton lining and comes in a smaller range of sizes. Along with the cotton lining, the asbestos lining was widely used as a brake material in heavy machinery.

Molded-asbestos linings contain asbestos fiber and friction modifiers; a thermoset polymer is used, with heat, to form a rigid or semirigid molding. The principal use was in drum brakes.

Molded-asbestos pads are similar to molded linings but have no flexibility; they were used for both clutches and brakes.

Sintered-metal pads are made of a mixture of copper and/or iron particles with friction modifiers, molded under high pressure and then heated to a high temperature to fuse the material. These pads are used in both brakes and clutches for heavy-duty applications.

Cermet pads are similar to the sintered-metal pads and have a substantial ceramic content.

Table 16–4 lists properties of typical brake linings. The linings may consist of a mixture of fibers to provide strength and ability to withstand high temperatures, various friction particles to obtain a degree of wear resistance as well as a higher coefficient of friction, and bonding materials.

Table 16–5 includes a wider variety of clutch friction materials, together with some of their properties. Some of these materials may be run wet by allowing them to dip in oil or to be sprayed by oil. This reduces the coefficient of friction somewhat but carries away more heat and permits higher pressures to be used.

Table 16–4Some Properties
of Brake Linings

	Woven Lining	Molded Lining	Rigid Block
Compressive strength, kpsi	10–15	10–18	10–15
Compressive strength, MPa	70–100	70–125	70–100
Tensile strength, kpsi	2.5–3	4–5	3–4
Tensile strength, MPa	17–21	27–35	21–27
Max. temperature, °F	400–500	500	750
Max. temperature, °C	200–260	260	400
Max. speed, ft/min	7500	5000	7500
Max. speed, m/s	38	25	38
Max. pressure, psi	50–100	100	150
Max. pressure, kPa	340–690	690	1000
Frictional coefficient, mean	0.45	0.47	0.40–45

Table 16-5

Friction Materials for Clutches

Material	Friction Coefficient		Max. Temperature		Max. Pressure	
	Wet	Dry	°F	°C	psi	kPa
Cast iron on cast iron	0.05	0.15–0.20	600	320	150–250	1000–1750
Powdered metal* on cast iron	0.05–0.1	0.1–0.4	1000	540	150	1000
Powdered metal* on hard steel	0.05–0.1	0.1–0.3	1000	540	300	2100
Wood on steel or cast iron	0.16	0.2–0.35	300	150	60–90	400–620
Leather on steel or cast iron	0.12	0.3–0.5	200	100	10–40	70–280
Cork on steel or cast iron	0.15–0.25	0.3–0.5	200	100	8–14	50–100
Felt on steel or cast iron	0.18	0.22	280	140	5–10	35–70
Woven asbestos* on steel or cast iron	0.1–0.2	0.3–0.6	350–500	175–260	50–100	350–700
Molded asbestos* on steel or cast iron	0.08–0.12	0.2–0.5	500	260	50–150	350–1000
Impregnated asbestos* on steel or cast iron	0.12	0.32	500–750	260–400	150	1000
Carbon graphite on steel	0.05–0.1	0.25	700–1000	370–540	300	2100

*The friction coefficient can be maintained with ± 5 percent for specific materials in this group.

16-11 Miscellaneous Clutches and Couplings

The square-jaw clutch shown in Fig. 16–25*a* is one form of positive-contact clutch. These clutches have the following characteristics:

- 1 They do not slip.
- 2 No heat is generated.
- 3 They cannot be engaged at high speeds.
- 4 Sometimes they cannot be engaged when both shafts are at rest.
- 5 Engagement at any speed is accompanied by shock.

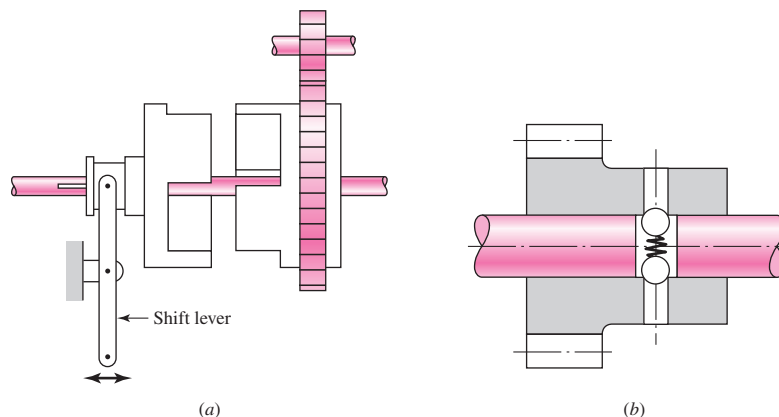
The greatest differences among the various types of positive clutches are concerned with the design of the jaws. To provide a longer period of time for shift action during engagement, the jaws may be ratchet-shaped, spiral-shaped, or gear-tooth-shaped. Sometimes a great many teeth or jaws are used, and they may be cut either circumferentially, so that they engage by cylindrical mating, or on the faces of the mating elements.

Although positive clutches are not used to the extent of the frictional-contact types, they do have important applications where synchronous operation is required, as, for example, in power presses or rolling-mill screw-downs.

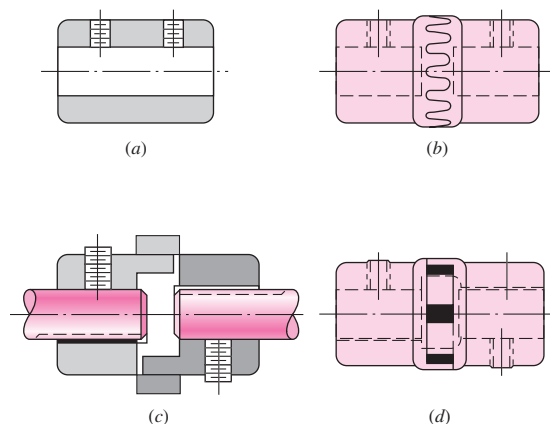
Devices such as linear drives or motor-operated screwdrivers must run to a definite limit and then come to a stop. An overload-release type of clutch is required for these applications. Figure 16–25*b* is a schematic drawing illustrating the principle of operation of such a clutch. These clutches are usually spring-loaded so as to release at a

Figure 16-25

(a) Square-jaw clutch;
(b) overload release clutch
using a detent.

**Figure 16-26**

Shaft couplings. (a) Plain.
(b) Light-duty toothed coupling.
(c) BOST-FLEX® through-bore
design having elastomer
insert to transmit torque by
compression; insert permits 1°
misalignment. (d) Three-jaw
coupling available with
bronze, rubber, or
polyurethane insert to minimize
vibration. (Reproduced by
permission, Boston Gear
Division, Colfax Corp.)



predetermined torque. The clicking sound which is heard when the overload point is reached is considered to be a desirable signal.

Both fatigue and shock loads must be considered in obtaining the stresses and deflections of the various portions of positive clutches. In addition, wear must generally be considered. The application of the fundamentals discussed in Parts 1 and 2 is usually sufficient for the complete design of these devices.

An overrunning clutch or coupling permits the driven member of a machine to “freewheel” or “overrun” because the driver is stopped or because another source of power increases the speed of the driven mechanism. The construction uses rollers or balls mounted between an outer sleeve and an inner member having cam flats machined around the periphery. Driving action is obtained by wedging the rollers between the sleeve and the cam flats. This clutch is therefore equivalent to a pawl and ratchet with an infinite number of teeth.

There are many varieties of overrunning clutches available, and they are built in capacities up to hundreds of horsepower. Since no slippage is involved, the only power loss is that due to bearing friction and windage.

The shaft couplings shown in Fig. 16-26 are representative of the selection available in catalogs.

16–12 Flywheels

The equation of motion for the flywheel represented in Fig. 16–1*b* is

$$\sum M = T_i(\theta_i, \dot{\theta}_i) - T_o(\theta_o, \dot{\theta}_o) - I\ddot{\theta} = 0$$

or

$$I\ddot{\theta} = T_i(\theta_i, \omega_i) - T_o(\theta_o, \omega_o) \quad (a)$$

where T_i is considered positive and T_o negative, and where $\dot{\theta}$ and $\ddot{\theta}$ are the first and second time derivatives of θ , respectively. Note that both T_i and T_o may depend for their values on the angular displacements θ_i and θ_o as well as their angular velocities ω_i and ω_o . In many cases the torque characteristic depends upon only one of these. Thus, the torque delivered by an induction motor depends upon the speed of the motor. In fact, motor manufacturers publish charts detailing the torque-speed characteristics of their various motors.

When the input and output torque functions are given, Eq. (a) can be solved for the motion of the flywheel using well-known techniques for solving linear and nonlinear differential equations. We can dispense with this here by assuming a rigid shaft, giving $\theta_i = \theta = \theta_o$ and $\omega_i = \omega = \omega_o$. Thus, Eq. (a) becomes

$$I\ddot{\theta} = T_i(\theta, \omega) - T_o(\theta, \omega) \quad (b)$$

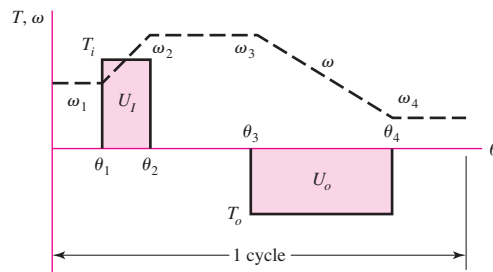
When the two torque functions are known and the starting values of the displacement θ and velocity ω are given, Eq. (b) can be solved for θ , ω , and $\ddot{\theta}$ as functions of time. However, we are not really interested in the instantaneous values of these terms at all. Primarily we want to know the overall performance of the flywheel. What should its moment of inertia be? How do we match the power source to the load? And what are the resulting performance characteristics of the system that we have selected?

To gain insight into the problem, a hypothetical situation is diagrammed in Fig. 16–27. An input power source subjects a flywheel to a constant torque T_i while the shaft rotates from θ_1 to θ_2 . This is a positive torque and is plotted upward. Equation (b) indicates that a positive acceleration $\ddot{\theta}$ will be the result, and so the shaft velocity increases from ω_1 to ω_2 . As shown, the shaft now rotates from θ_2 to θ_3 with zero torque and hence, from Eq. (b), with zero acceleration. Therefore $\omega_3 = \omega_2$. From θ_3 to θ_4 a load, or output torque, of constant magnitude is applied, causing the shaft to slow down from ω_3 to ω_4 . Note that the output torque is plotted in the negative direction in accordance with Eq. (b).

The work input to the flywheel is the area of the rectangle between θ_1 and θ_2 , or

$$U_i = T_i(\theta_2 - \theta_1) \quad (c)$$

Figure 16–27



The work output of the flywheel is the area of the rectangle from θ_3 to θ_4 , or

$$U_o = T_o(\theta_4 - \theta_3) \quad (d)$$

If U_o is greater than U_i , the load uses more energy than has been delivered to the flywheel and so ω_4 will be less than ω_1 . If $U_o = U_i$, ω_4 will be equal to ω_1 because the gains and losses are equal; we are assuming no friction losses. And finally, ω_4 will be greater than ω_1 if $U_i > U_o$.

We can also write these relations in terms of kinetic energy. At $\theta = \theta_1$ the flywheel has a velocity of ω_1 rad/s, and so its kinetic energy is

$$E_1 = \frac{1}{2} I \omega_1^2 \quad (e)$$

At $\theta = \theta_2$ the velocity is ω_2 , and so

$$E_2 = \frac{1}{2} I \omega_2^2 \quad (f)$$

Thus the change in kinetic energy is

$$E_2 - E_1 = \frac{1}{2} I (\omega_2^2 - \omega_1^2) \quad (16-61)$$

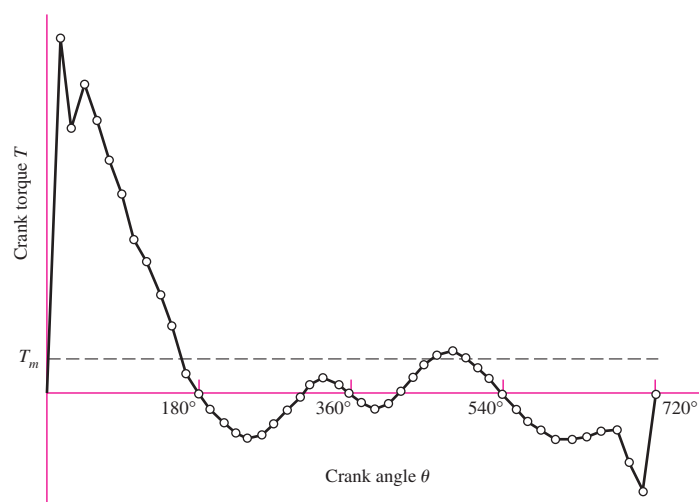
Many of the torque displacement functions encountered in practical engineering situations are so complicated that they must be integrated by numerical methods. Figure 16–28, for example, is a typical plot of the engine torque for one cycle of motion of a single-cylinder internal combustion engine. Since a part of the torque curve is negative, the flywheel must return part of the energy back to the engine. Integrating this curve from $\theta = 0$ to 4π and dividing the result by 4π yields the mean torque T_m available to drive a load during the cycle.

It is convenient to define a *coefficient of speed fluctuation* as

$$C_s = \frac{\omega_2 - \omega_1}{\omega} \quad (16-62)$$

Figure 16–28

Relation between torque and crank angle for a one-cylinder, four-stroke-cycle internal combustion engine.



where ω is the nominal angular velocity, given by

$$\omega = \frac{\omega_2 + \omega_1}{2} \quad (16-63)$$

Equation (16-61) can be factored to give

$$E_2 - E_1 = \frac{I}{2}(\omega_2 - \omega_1)(\omega_2 + \omega_1)$$

Since $\omega_2 - \omega_1 = C_s \omega$ and $\omega_2 + \omega_1 = 2\omega$, we have

$$E_2 - E_1 = C_s I \omega^2 \quad (16-64)$$

Equation (16-64) can be used to obtain an appropriate flywheel inertia corresponding to the energy change $E_2 - E_1$.

EXAMPLE 16-6

Table 16-6 lists values of the torque used to plot Fig. 16-28. The nominal speed of the engine is to be 250 rad/s.

(a) Integrate the torque-displacement function for one cycle and find the energy that can be delivered to a load during the cycle.

(b) Determine the mean torque T_m (see Fig. 16-28).

(c) The greatest energy fluctuation is approximately between $\theta = 15^\circ$ and $\theta = 150^\circ$ on the torque diagram; see Fig. 16-28 and note that $T_o = -T_m$. Using a coefficient of speed fluctuation $C_s = 0.1$, find a suitable value for the flywheel inertia.

(d) Find ω_2 and ω_1 .

Solution

(a) Using $n = 48$ intervals of $\Delta\theta = 4\pi/48$, numerical integration of the data of Table 16-6 yields $E = 3368 \text{ in} \cdot \text{lb}$. This is the energy that can be delivered to the load.

Table 16-6

Plotting Data for
Fig. 16-29

θ , deg	T , lbf · in	θ , deg	T , lbf · in	θ , deg	T , lbf · in	θ , deg	T , lbf · in
0	0	195	-107	375	-85	555	-107
15	2800	210	-206	390	-125	570	-206
30	2090	225	-260	405	-89	585	-292
45	2430	240	-323	420	8	600	-355
60	2160	255	-310	435	126	615	-371
75	1840	270	-242	450	242	630	-362
90	1590	285	-126	465	310	645	-312
105	1210	300	-8	480	323	660	-272
120	1066	315	89	495	280	675	-274
135	803	330	125	510	206	690	-548
150	532	345	85	525	107	705	-760
165	184	360	0	540	0	720	0
180	0						

Answer (b)
$$T_m = \frac{3368}{4\pi} = 268 \text{ lbf} \cdot \text{in}$$

(c) The largest positive loop on the torque-displacement diagram occurs between $\theta = 0^\circ$ and $\theta = 180^\circ$. We select this loop as yielding the largest speed change. Subtracting $268 \text{ lbf} \cdot \text{in}$ from the values in Table 16–6 for this loop gives, respectively, $-268, 2532, 1822, 2162, 1892, 1572, 1322, 942, 798, 535, 264, -84,$ and $-268 \text{ lbf} \cdot \text{in}$. Numerically integrating $T - T_m$ with respect to θ yields $E_2 - E_1 = 3531 \text{ lbf} \cdot \text{in}$. We now solve Eq. (16–64) for I . This gives

Answer
$$I = \frac{E_2 - E_1}{C_s \omega^2} = \frac{3531}{0.1(250)^2} = 0.565 \text{ lbf} \cdot \text{s}^2 \text{ in}$$

(d) Equations (16–62) and (16–63) can be solved simultaneously for ω_2 and ω_1 . Substituting appropriate values in these two equations yields

Answer
$$\omega_2 = \frac{\omega}{2}(2 + C_s) = \frac{250}{2}(2 + 0.1) = 262.5 \text{ rad/s}$$

Answer
$$\omega_1 = 2\omega - \omega_2 = 2(250) - 262.5 = 237.5 \text{ rad/s}$$

These two speeds occur at $\theta = 180^\circ$ and $\theta = 0^\circ$, respectively.

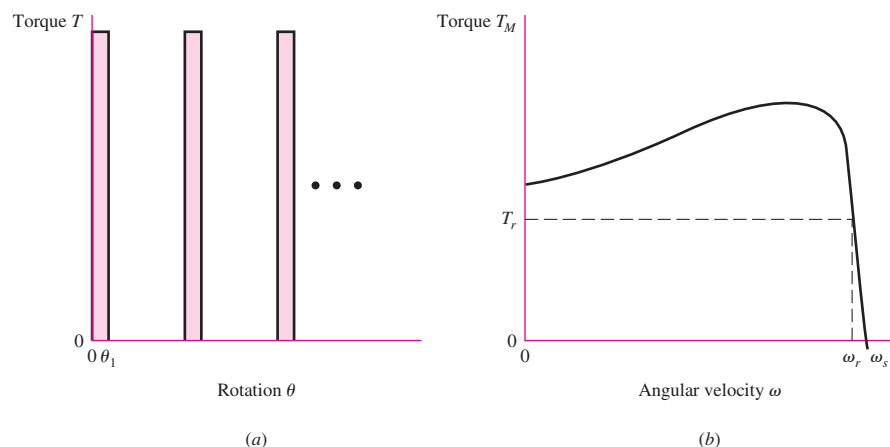
Punch-press torque demand often takes the form of a severe impulse and the running friction of the drive train. The motor overcomes the minor task of overcoming friction while attending to the major task of restoring the flywheel's angular speed. The situation can be idealized as shown in Fig. 16–29. Neglecting the running friction, Euler's equation can be written as

$$T(\theta_1 - 0) = \frac{1}{2}I(\omega_1^2 - \omega_2^2) = E_2 - E_1$$

where the only significant inertia is that of the flywheel. Punch presses can have the motor and flywheel on one shaft, then, through a gear reduction, drive a slider-crank mechanism that carries the punching tool. The motor can be connected to the punch

Figure 16–29

(a) Punch-press torque demand during punching. (b) Squirrel-cage electric motor torque-speed characteristic.



continuously, creating a punching rhythm, or it can be connected on command through a clutch that allows one punch and a disconnect. The motor and flywheel must be sized for the most demanding service, which is steady punching. The work done is given by

$$W = \int_{\theta_1}^{\theta_2} [T(\theta) - T] d\theta = \frac{1}{2} I (\omega_{\max}^2 - \omega_{\min}^2)$$

This equation can be arranged to include the coefficient of speed fluctuation C_s as follows:

$$\begin{aligned} W &= \frac{1}{2} I (\omega_{\max}^2 - \omega_{\min}^2) = \frac{I}{2} (\omega_{\max} - \omega_{\min}) (\omega_{\max} + \omega_{\min}) \\ &= \frac{I}{2} (C_s \bar{\omega}) (2\omega_0) = I C_s \bar{\omega} \omega_0 \end{aligned}$$

When the speed fluctuation is low, $\omega_0 \doteq \bar{\omega}$, and

$$I = \frac{W}{C_s \bar{\omega}^2}$$

An induction motor has a linear torque characteristic $T = a\omega + b$ in the range of operation. The constants a and b can be found from the nameplate speed ω_r and the synchronous speed ω_s :

$$\begin{aligned} a &= \frac{T_r - T_s}{\omega_r - \omega_s} = \frac{T_r}{\omega_r - \omega_s} = -\frac{T_r}{\omega_s - \omega_r} \\ b &= \frac{T_r \omega_s - T_s \omega_r}{\omega_s - \omega_r} = \frac{T_r \omega_s}{\omega_s - \omega_r} \end{aligned} \tag{16-65}$$

For example, a 3-hp three-phase squirrel-cage ac motor rated at 1125 rev/min has a torque of $63\,025(3)/1125 = 168.1$ lbf·in. The rated angular velocity is $\omega_r = 2\pi n_r/60 = 2\pi(1125)/60 = 117.81$ rad/s, and the synchronous angular velocity $\omega_s = 2\pi(1200)/60 = 125.66$ rad/s. Thus $a = -21.41$ lbf·in·s/rad, and $b = 2690.9$ lbf·in, and we can express $T(\omega)$ as $a\omega + b$. During the interval from t_1 to t_2 the motor accelerates the flywheel according to $I\ddot{\theta} = T_M$ (i.e., $T d\omega/dt = T_M$). Separating the equation $T_M = I d\omega/dt$ we have

$$\int_{t_1}^{t_2} dt = \int_{\omega_r}^{\omega_2} \frac{I d\omega}{T_M} = I \int_{\omega_r}^{\omega_2} \frac{d\omega}{a\omega + b} = \frac{I}{a} \ln \frac{a\omega_2 + b}{a\omega_r + b} = \frac{I}{a} \ln \frac{T_2}{T_r}$$

or

$$t_2 - t_1 = \frac{I}{a} \ln \frac{T_2}{T_r} \tag{16-66}$$

For the deceleration interval when the motor and flywheel feel the punch torque on the shaft as T_L , $(T_M - T_L) = I d\omega/dt$, or

$$\int_0^{t_1} dt = I \int_{\omega_2}^{\omega_r} \frac{d\omega}{T_M - T_L} = I \int_{\omega_2}^{\omega_r} \frac{d\omega}{a\omega + b - T_L} = \frac{I}{a} \ln \frac{a\omega_r + b - T_L}{a\omega_2 + b - T_L}$$

or

$$t_1 = \frac{I}{a} \ln \frac{T_r - T_L}{T_2 - T_L} \tag{16-67}$$

We can divide Eq. (16–66) by Eq. (16–67) to obtain

$$\frac{T_2}{T_r} = \left(\frac{T_L - T_r}{T_L - T_2} \right)^{(t_2 - t_1)/t_1} \quad (16-68)$$

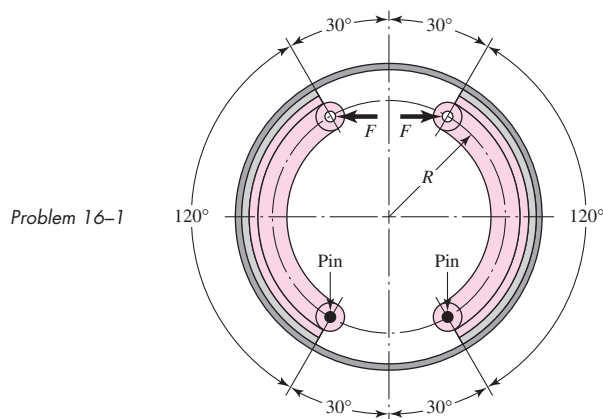
Equation (16–68) can be solved for T_2 numerically. Having T_2 the flywheel inertia is, from Eq. (16–66),

$$I = \frac{a(t_2 - t_1)}{\ln(T_2/T_r)} \quad (16-69)$$

It is important that a be in units of $\text{lbf} \cdot \text{in} \cdot \text{s}/\text{rad}$ so that I has proper units. The constant a should not be in $\text{lbf} \cdot \text{in}$ per rev/min or $\text{lbf} \cdot \text{in}$ per rev/s.

PROBLEMS

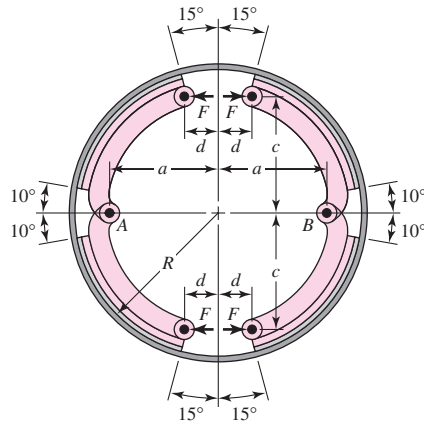
- 16-1** The figure shows an internal rim-type brake having an inside rim diameter of 12 in and a dimension $R = 5$ in. The shoes have a face width of $1\frac{1}{2}$ in and are both actuated by a force of 500 lbf. The mean coefficient of friction is 0.28.
- Find the maximum pressure and indicate the shoe on which it occurs.
 - Estimate the braking torque effected by each shoe, and find the total braking torque.
 - Estimate the resulting hinge-pin reactions.



- 16-2** For the brake in Prob. 16–1, consider the pin and actuator locations to be the same. However, instead of 120° , let the friction surface of the brake shoes be 90° and centrally located. Find the maximum pressure and the total braking torque.
- 16-3** In the figure for Prob. 16–1, the inside rim diameter is 280 mm and the dimension R is 90 mm. The shoes have a face width of 30 mm. Find the braking torque and the maximum pressure for each shoe if the actuating force is 1000 N, the drum rotation is counterclockwise, and $f = 0.30$.
- 16-4** The figure shows a 400-mm-diameter brake drum with four internally expanding shoes. Each of the hinge pins A and B supports a pair of shoes. The actuating mechanism is to be arranged to produce the same force F on each shoe. The face width of the shoes is 75 mm. The material used permits a coefficient of friction of 0.24 and a maximum pressure of 1000 kPa.
- Determine the actuating force.

Problem 16-4

The dimensions in millimeters are $a = 150$, $c = 165$, $R = 200$, and $d = 50$.

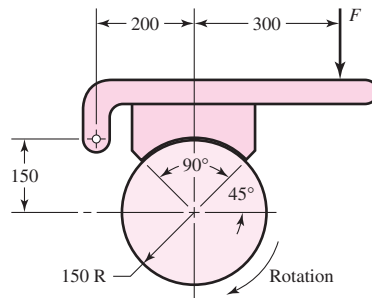


(b) Estimate the brake capacity.

(c) Noting that rotation may be in either direction, estimate the hinge-pin reactions.

16-5

The block-type hand brake shown in the figure has a face width of 30 mm and a mean coefficient of friction of 0.25. For an estimated actuating force of 400 N, find the maximum pressure on the shoe and find the braking torque.



Problem 16-5

Dimensions in millimeters.

16-6

Suppose the standard deviation of the coefficient of friction in Prob. 16-5 is $\hat{\sigma}_f = 0.025$, where the deviation from the mean is due entirely to environmental conditions. Find the brake torques corresponding to $\pm 3\hat{\sigma}_f$.

16-7

The brake shown in the figure has a coefficient of friction of 0.30, a face width of 2 in, and a limiting shoe lining pressure of 150 psi. Find the limiting actuating force F and the torque capacity.

16-8

Refer to the symmetrical pivoted external brake shoe of Fig. 16-12 and Eq. (16-15). Suppose the pressure distribution was uniform, that is, the pressure p is independent of θ . What would the pivot distance a' be? If $\theta_1 = \theta_2 = 60^\circ$, compare a with a' .

16-9

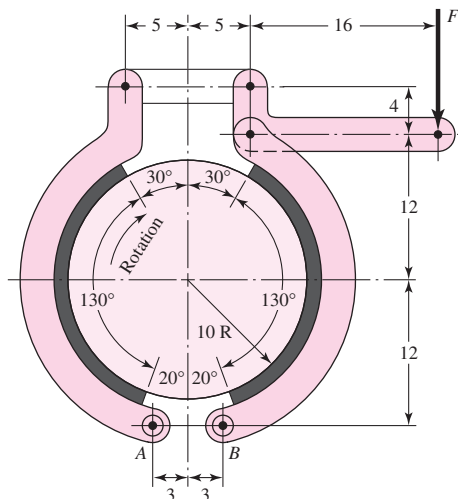
The shoes on the brake depicted in the figure subtend a 90° arc on the drum of this external pivoted-shoe brake. The actuation force P is applied to the lever. The rotation direction of the drum is counterclockwise, and the coefficient of friction is 0.30.

(a) What should the dimension e be?

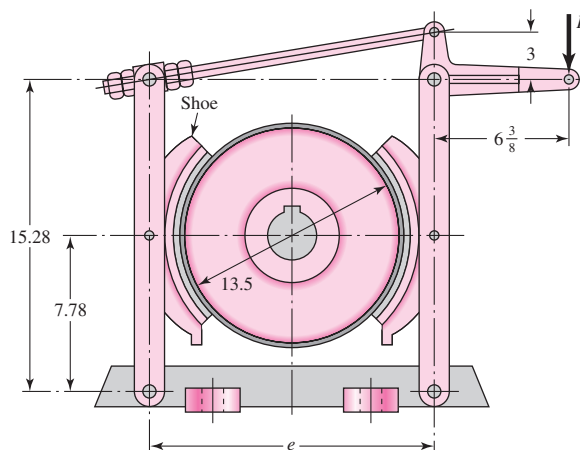
(b) Draw the free-body diagrams of the handle lever and both shoe levers, with forces expressed in terms of the actuation force P .

(c) Does the direction of rotation of the drum affect the braking torque?

Problem 16–7
Dimensions in inches.



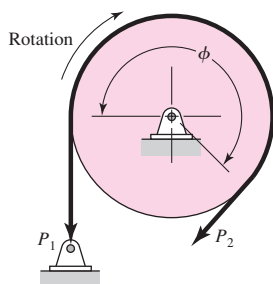
Problem 16–9
Dimensions in inches.



16-10 Problem 16–9 is preliminary to analyzing the brake. A molded lining is used dry in the brake of Prob. 16–9 on a cast iron drum. The shoes are 7.5 in wide and subtend a 90° arc. Find the actuation force and the braking torque.

16-11 The maximum band interface pressure on the brake shown in the figure is 90 psi. Use a 14-in-diameter drum, a band width of 4 in, a coefficient of friction of 0.25, and an angle-of-wrap of 270° . Find the band tensions and the torque capacity.

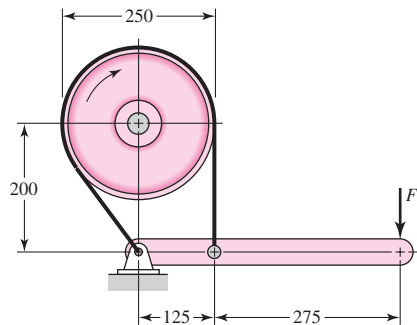
Problem 16–11



16-12 The drum for the band brake in Prob. 16-11 is 300 mm in diameter. The band selected has a mean coefficient of friction of 0.28 and a width of 80 mm. It can safely support a tension of 7.6 kN. If the angle of wrap is 270° , find the lining pressure and the torque capacity.

16-13 The brake shown in the figure has a coefficient of friction of 0.30 and is to operate using a maximum force F of 400 N. If the band width is 50 mm, find the band tensions and the braking torque.

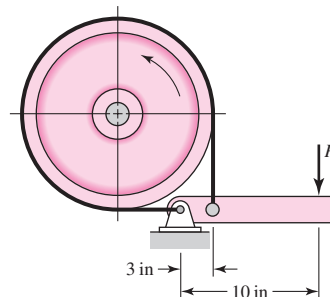
Problem 16-13
Dimensions in millimeters.



16-14 The figure depicts a band brake whose drum rotates counterclockwise at 200 rev/min. The drum diameter is 16 in and the band lining 3 in wide. The coefficient of friction is 0.20. The maximum lining interface pressure is 70 psi.

- Find the brake torque, necessary force P , and steady-state power.
- Complete the free-body diagram of the drum. Find the bearing radial load that a pair of straddle-mounted bearings would have to carry.
- What is the lining pressure p at both ends of the contact arc?

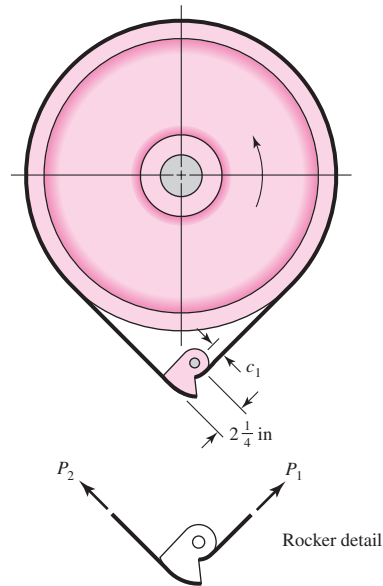
Problem 16-14



16-15 The figure shows a band brake designed to prevent “backward” rotation of the shaft. The angle of wrap is 270° , the band width is $2\frac{1}{8}$ in, and the coefficient of friction is 0.20. The torque to be resisted by the brake is 150 lbf · ft. The diameter of the pulley is $8\frac{1}{4}$ in.

- What dimension c_1 will just prevent backward motion?
- If the rocker was designed with $c_1 = 1$ in, what is the maximum pressure between the band and drum at 150 lbf · ft back torque?
- If the back-torque demand is 100 lbf · in, what is the largest pressure between the band and drum?

Problem 16–15



- 16–16** A plate clutch has a single pair of mating friction surfaces 300 mm OD by 225 mm ID. The mean value of the coefficient of friction is 0.25, and the actuating force is 5 kN.
- Find the maximum pressure and the torque capacity using the uniform-wear model.
 - Find the maximum pressure and the torque capacity using the uniform-pressure model.

- 16–17** A hydraulically operated multidisk plate clutch has an effective disk outer diameter of 6.5 in and an inner diameter of 4 in. The coefficient of friction is 0.24, and the limiting pressure is 120 psi. There are six planes of sliding present.
- Using the uniform wear model, estimate the axial force F and the torque T .
 - Let the inner diameter of the friction pairs d be a variable. Complete the following table:

d , in	2	3	4	5	6
T , lbf · in					

- What does the table show?

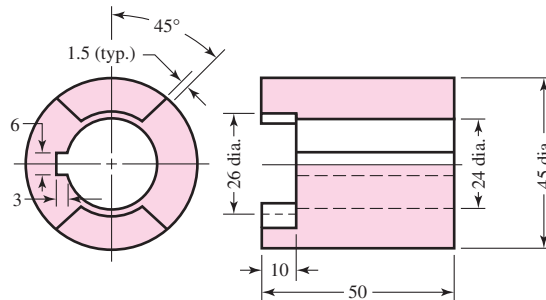
- 16–18** Look again at Prob. 16–17.
- Show how the optimal diameter d^* is related to the outside diameter D .
 - What is the optimal inner diameter?
 - What does the tabulation show about maxima?
 - Common proportions for such plate clutches lie in the range $0.45 \leq d/D \leq 0.80$. Is the result in part *a* useful?

- 16–19** A cone clutch has $D = 330$ mm, $d = 306$ mm, a cone length of 60 mm, and a coefficient of friction of 0.26. A torque of 200 N · m is to be transmitted. For this requirement, estimate the actuating force and pressure by both models.

- 16–20** Show that for the caliper brake the $T/(fFD)$ versus d/D plots are the same as Eqs. (b) and (c) of Sec. 16–5.

- 16–21** A two-jaw clutch has the dimensions shown in the figure and is made of ductile steel. The clutch has been designed to transmit 2 kW at 500 rev/min. Find the bearing and shear stresses in the key and the jaws.

Problem 16–21
Dimensions in millimeters.



16–22 A brake has a normal braking torque of $320 \text{ N} \cdot \text{m}$ and heat-dissipating surfaces whose mass is 18 kg . Suppose a load is brought to rest in 8.3 s from an initial angular speed of 1800 rev/min using the normal braking torque; estimate the temperature rise of the heat-dissipating surfaces.

16–23 A cast-iron flywheel has a rim whose OD is 60 in and whose ID is 56 in . The flywheel weight is to be such that an energy fluctuation of $5000 \text{ ft} \cdot \text{lbf}$ will cause the angular speed to vary no more than 240 to 260 rev/min . Estimate the coefficient of speed fluctuation. If the weight of the spokes is neglected, what should be the width of the rim?

16–24 A single-geared blanking press has a stroke of 8 in and a rated capacity of 35 tons . A cam-driven ram is assumed to be capable of delivering the full press load at constant force during the last 15 percent of a constant-velocity stroke. The camshaft has an average speed of 90 rev/min and is geared to the flywheel shaft at a $6:1$ ratio. The total work done is to include an allowance of 16 percent for friction.

- Estimate the maximum energy fluctuation.
- Find the rim weight for an effective diameter of 48 in and a coefficient of speed fluctuation of 0.10 .

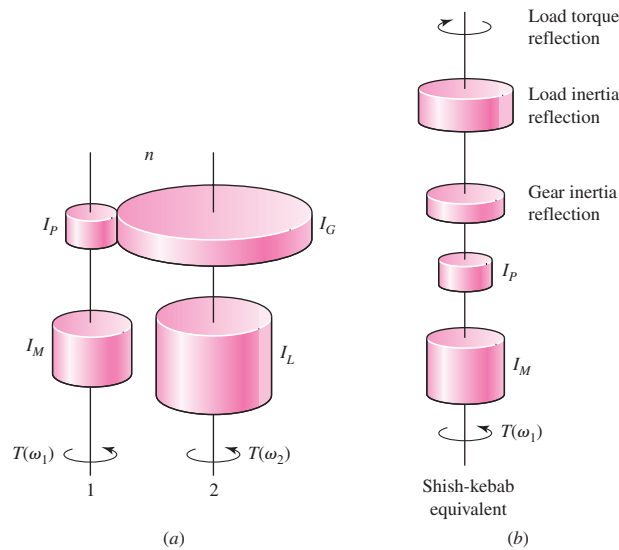
16–25 Using the data of Table 16–6, find the mean output torque and flywheel inertia required for a three-cylinder in-line engine corresponding to a nominal speed of 2400 rev/min . Use $C_s = 0.30$.

16–26 When a motor armature inertia, a pinion inertia, and a motor torque reside on a motor shaft, and a gear inertia, a load inertia, and a load torque exist on a second shaft, it is useful to reflect all the torques and inertias to one shaft, say, the armature shaft. We need some rules to make such reflection easy. Consider the pinion and gear as disks of pitch radius.

- A torque on a second shaft is reflected to the motor shaft as the load torque divided by the negative of the stepdown ratio.
- An inertia on a second shaft is reflected to the motor shaft as its inertia divided by the stepdown ratio squared.
- The inertia of a disk gear on a second shaft in mesh with a disk pinion on the motor shaft is reflected to the pinion shaft as the *pinion* inertia multiplied by the stepdown ratio squared.

- Verify the three rules.
- Using the rules, reduce the two-shaft system in the figure to a motor-shaft shish-kebab equivalent. Correctly done, the dynamic response of the shish kebab and the real system are identical.
- For a stepdown ratio of $n = 10$ compare the shish-kebab inertias.

Problem 16–26
Dimensions in millimeters.



16–27

Apply the rules of Prob. 16–26 to the three-shaft system shown in the figure to create a motor shaft shish kebab.

(a) Show that the equivalent inertia I_e is given by

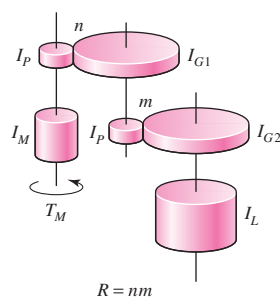
$$I_e = I_M + I_P + n^2 I_P + \frac{I_P}{n^2} + \frac{m^2 I_P}{n^2} + \frac{I_L}{m^2 n^2}$$

(b) If the overall gear reduction R is a constant nm , show that the equivalent inertia becomes

$$I_e = I_M + I_P + n^2 I_P + \frac{I_P}{n^2} + \frac{R^2 I_P}{n^4} + \frac{I_L}{R^2}$$

(c) If the problem is to minimize the gear-train inertia, find the ratios n and m for the values of $I_P = 1$, $I_M = 10$, $I_L = 100$, and $R = 10$.

Problem 16–27



16–28

For the conditions of Prob. 16–27, make a plot of the equivalent inertia I_e as ordinate and the stepdown ratio n as abscissa in the range $1 \leq n \leq 10$. How does the minimum inertia compare to the single-step inertia?

16–29

A punch-press geared 10:1 is to make six punches per minute under circumstances where the torque on the crankshaft is 1300 lbf · ft for $\frac{1}{2}$ s. The motor's nameplate reads 3 bhp at 1125 rev/min for continuous duty. Design a satisfactory flywheel for use on the motor shaft to the extent of specifying material and rim inside and outside diameters as well as its width. As you prepare your

specifications, note ω_{\max} , ω_{\min} , the coefficient of speed fluctuation C_s , energy transfer, and peak power that the flywheel transmits to the punch-press. Note power and shock conditions imposed on the gear train because the flywheel is on the motor shaft.

- 16–30** The punch-press of Prob. 16–29 needs a flywheel for service on the crankshaft of the punch-press. Design a satisfactory flywheel to the extent of specifying material, rim inside and outside diameters, and width. Note ω_{\max} , ω_{\min} , C_s , energy transfer, and peak power the flywheel transmits to the punch. What is the peak power seen in the gear train? What power and shock conditions must the gear-train transmit?
- 16–31** Compare the designs resulting from the tasks assigned in Probs. 16–29 and 16–30. What have you learned? What recommendations do you have?

17

Flexible Mechanical Elements

Chapter Outline

17-1	Belts 860
17-2	Flat- and Round-Belt Drives 863
17-3	V Belts 878
17-4	Timing Belts 886
17-5	Roller Chain 887
17-6	Wire Rope 896
17-7	Flexible Shafts 904

Belts, ropes, chains, and other similar elastic or flexible machine elements are used in conveying systems and in the transmission of power over comparatively long distances. It often happens that these elements can be used as a replacement for gears, shafts, bearings, and other relatively rigid power-transmission devices. In many cases their use simplifies the design of a machine and substantially reduces the cost.

In addition, since these elements are elastic and usually quite long, they play an important part in absorbing shock loads and in damping out and isolating the effects of vibration. This is an important advantage as far as machine life is concerned.

Most flexible elements do not have an infinite life. When they are used, it is important to establish an inspection schedule to guard against wear, aging, and loss of elasticity. The elements should be replaced at the first sign of deterioration.

17-1 Belts

The four principal types of belts are shown, with some of their characteristics, in Table 17-1. *Crowned pulleys* are used for flat belts, and *grooved pulleys*, or *sheaves*, for round and V belts. Timing belts require *toothed wheels*, or *sprockets*. In all cases, the pulley axes must be separated by a certain minimum distance, depending upon the belt type and size, to operate properly. Other characteristics of belts are:

- They may be used for long center distances.
- Except for timing belts, there is some slip and creep, and so the angular-velocity ratio between the driving and driven shafts is neither constant nor exactly equal to the ratio of the pulley diameters.
- In some cases an idler or tension pulley can be used to avoid adjustments in center distance that are ordinarily necessitated by age or the installation of new belts.

Figure 17-1 illustrates the geometry of open and closed flat-belt drives. For a flat belt with this drive the belt tension is such that the sag or droop is visible in Fig. 17-2a, when the belt is running. Although the top is preferred for the loose side of the belt, for other belt types either the top or the bottom may be used, because their installed tension is usually greater.

Two types of reversing drives are shown in Fig. 17-2 Notice that both sides of the belt contact the pulleys in Figs. 17-2b and 17-2c, and so these drives cannot be used with V belts or timing belts.

Table 17-1

Characteristics of Some Common Belt Types. Figures are Cross Sections except for the Timing Belt, which is a Side View

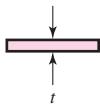

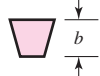
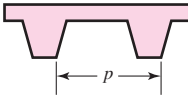
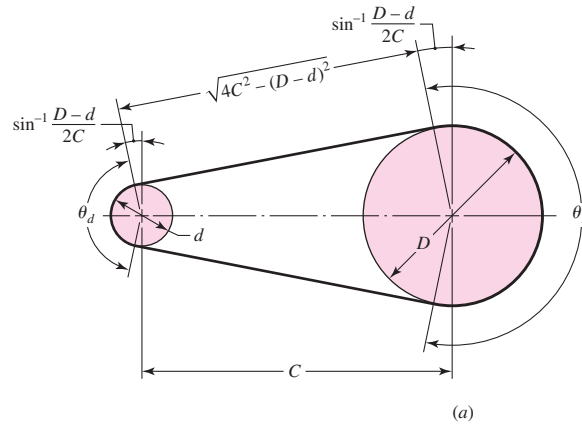
Belt Type	Figure	Joint	Size Range	Center Distance
Flat		Yes	$t = \begin{cases} 0.03 \text{ to } 0.20 \text{ in} \\ 0.75 \text{ to } 5 \text{ mm} \end{cases}$	No upper limit
Round		Yes	$d = \frac{1}{8} \text{ to } \frac{3}{4} \text{ in}$	No upper limit
V		None	$b = \begin{cases} 0.31 \text{ to } 0.91 \text{ in} \\ 8 \text{ to } 19 \text{ mm} \end{cases}$	Limited
Timing		None	$p = 2 \text{ mm and up}$	Limited

Figure 17-1

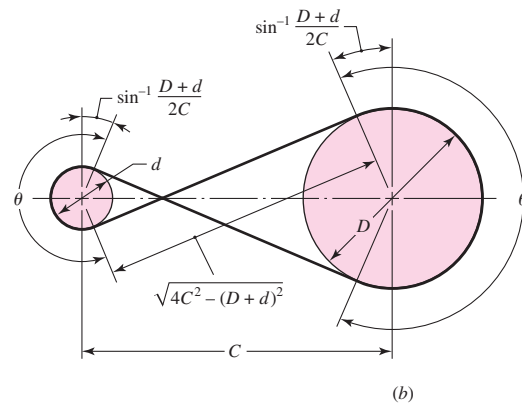
Flat-belt geometry. (a) Open belt. (b) Crossed belt.



$$\theta_d = \pi - 2 \sin^{-1} \frac{D-d}{2C}$$

$$\theta_D = \pi + 2 \sin^{-1} \frac{D-d}{2C}$$

$$L = \sqrt{4C^2 - (D-d)^2} + \frac{1}{2}(D\theta_D + d\theta_d)$$

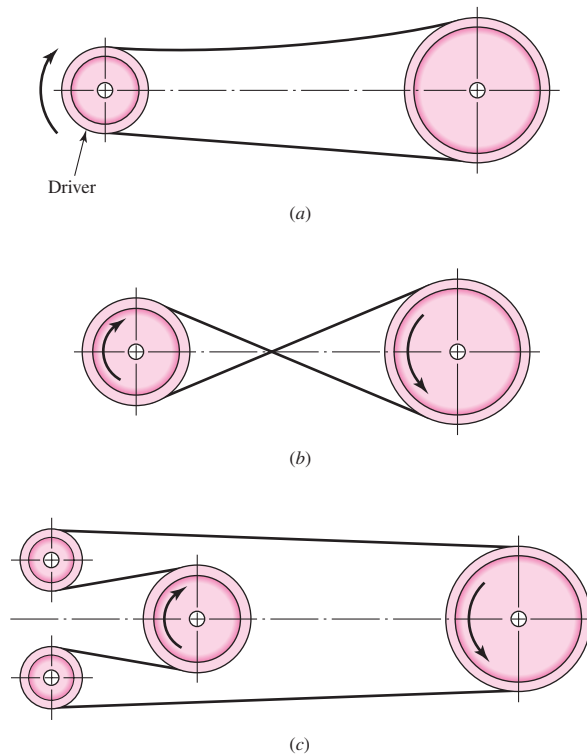


$$\theta = \pi + 2 \sin^{-1} \frac{D+d}{2C}$$

$$L = \sqrt{4C^2 - (D+d)^2} + \frac{1}{2}(D+d)\theta$$

Figure 17-2

Nonreversing and reversing belt drives. (a) Nonreversing open belt. (b) Reversing crossed belt. Crossed belts must be separated to prevent rubbing if high-friction materials are used. (c) Reversing open-belt drive.



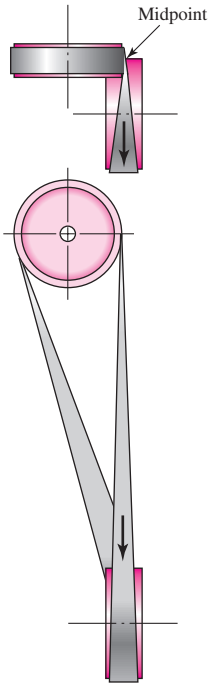


Figure 17-3

Quarter-twist belt drive; an idler guide pulley must be used if motion is to be in both directions.

Figure 17-3 shows a flat-belt drive with out-of-plane pulleys. The shafts need not be at right angles as in this case. Note the top view of the drive in Fig. 17-3. The pulleys must be positioned so that the belt leaves each pulley in the midplane of the other pulley face. Other arrangements may require guide pulleys to achieve this condition.

Another advantage of flat belts is shown in Fig. 17-4, where clutching action is obtained by shifting the belt from a loose to a tight or driven pulley.

Figure 17-5 shows two variable-speed drives. The drive in Fig. 17-5a is commonly used only for flat belts. The drive of Fig. 17-5b can also be used for V belts and round belts by using grooved sheaves.

Flat belts are made of urethane and also of rubber-impregnated fabric reinforced with steel wire or nylon cords to take the tension load. One or both surfaces may have a friction surface coating. Flat belts are quiet, they are efficient at high speeds, and they can transmit large amounts of power over long center distances. Usually, flat belting is purchased by the roll and cut and the ends are joined by using special kits furnished by the manufacturer. Two or more flat belts running side by side, instead of a single wide belt, are often used to form a conveying system.

A V belt is made of fabric and cord, usually cotton, rayon, or nylon, and impregnated with rubber. In contrast with flat belts, V belts are used with similar sheaves and at shorter center distances. V belts are slightly less efficient than flat belts, but a number of them can be used on a single sheave, thus making a multiple drive. V belts are made only in certain lengths and have no joints.

Timing belts are made of rubberized fabric and steel wire and have teeth that fit into grooves cut on the periphery of the sprockets. The timing belt does not stretch or slip and consequently transmits power at a constant angular-velocity ratio. The fact that the belt is toothed provides several advantages over ordinary belting. One of these is that no initial tension is necessary, so that fixed-center drives may be used. Another is

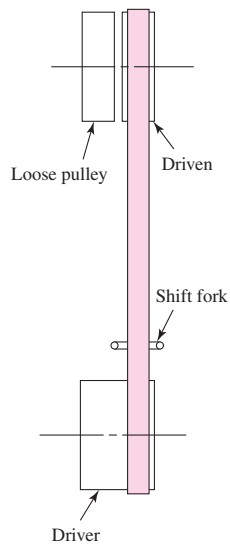


Figure 17-4

This drive eliminates the need for a clutch. Flat belt can be shifted left or right by use of a fork.

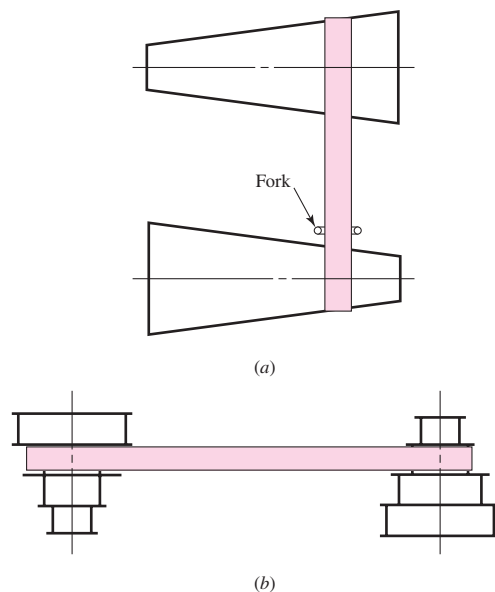


Figure 17-5

Variable-speed belt drives.

the elimination of the restriction on speeds; the teeth make it possible to run at nearly any speed, slow or fast. Disadvantages are the first cost of the belt, the necessity of grooving the sprockets, and the attendant dynamic fluctuations caused at the belt-tooth meshing frequency.

17-2 Flat- and Round-Belt Drives

Modern flat-belt drives consist of a strong elastic core surrounded by an elastomer; these drives have distinct advantages over gear drives or V-belt drives. A flat-belt drive has an efficiency of about 98 percent, which is about the same as for a gear drive. On the other hand, the efficiency of a V-belt drive ranges from about 70 to 96 percent.¹ Flat-belt drives produce very little noise and absorb more torsional vibration from the system than either V-belt or gear drives.

When an open-belt drive (Fig. 17-1a) is used, the contact angles are found to be

$$\begin{aligned}\theta_d &= \pi - 2 \sin^{-1} \frac{D-d}{2C} \\ \theta_D &= \pi + 2 \sin^{-1} \frac{D-d}{2C}\end{aligned}\tag{17-1}$$

where D = diameter of large pulley

d = diameter of small pulley

C = center distance

θ = angle of contact

The length of the belt is found by summing the two arc lengths with twice the distance between the beginning and end of contact. The result is

$$L = [4C^2 - (D-d)^2]^{1/2} + \frac{1}{2}(D\theta_D + d\theta_d)\tag{17-2}$$

A similar set of equations can be derived for the crossed belt of Fig. 17-2b. For this belt, the angle of wrap is the same for both pulleys and is

$$\theta = \pi + 2 \sin^{-1} \frac{D+d}{2C}\tag{17-3}$$

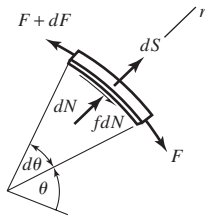
The belt length for crossed belts is found to be

$$L = [4C^2 - (D+d)^2]^{1/2} + \frac{1}{2}(D+d)\theta\tag{17-4}$$

Firbank² explains flat-belt-drive theory in the following way. A change in belt tension due to friction forces between the belt and pulley will cause the belt to elongate or contract and move relative to the surface of the pulley. This motion is caused by *elastic creep* and is associated with sliding friction as opposed to static friction. The action at the driving pulley, through that portion of the angle of contact that is actually transmitting power, is such that the belt moves more slowly than the surface speed of the pulley because of the elastic creep. The angle of contact is made up of the *effective arc*,

¹A. W. Wallin, "Efficiency of Synchronous Belts and V-Belts," *Proc. Nat. Conf. Power Transmission*, vol. 5, Illinois Institute of Technology, Chicago, Nov. 7-9, 1978, pp. 265-271.

²T. C. Firbank, *Mechanics of the Flat Belt Drive*, ASME paper no. 72-PTG-21.


Figure 17-6

Free body of an infinitesimal element of a flat belt in contact with a pulley.

through which power is transmitted, and the *idle arc*. For the driving pulley the belt first contacts the pulley with a *tight-side tension* F_1 and a velocity V_1 , which is the same as the surface velocity of the pulley. The belt then passes through the idle arc with no change in F_1 or V_1 . Then creep or sliding contact begins, and the belt tension changes in accordance with the friction forces. At the end of the effective arc the belt leaves the pulley with a *loose-side tension* F_2 and a reduced speed V_2 .

Firbank has used this theory to express the mechanics of flat-belt drives in mathematical form and has verified the results by experiment. His observations include the finding that substantially more power is transmitted by static friction than sliding friction. He also found that the coefficient of friction for a belt having a nylon core and leather surface was typically 0.7, but that it could be raised to 0.9 by employing special surface finishes.

Our model will assume that the friction force on the belt is proportional to the normal pressure along the arc of contact. We seek first a relationship between the tight side tension and slack side tension, similar to that of band brakes but incorporating the consequences of movement, that is, centrifugal tension in the belt. In Fig. 17-6 we see a free body of a small segment of the belt. The differential force dS is due to centrifugal force, dN is the normal force between the belt and pulley, and $f dN$ is the shearing traction due to friction at the point of slip. The belt width is b and the thickness is t . The belt mass per unit length is m . The centrifugal force dS can be expressed as

$$dS = (mr d\theta)r\omega^2 = mr^2\omega^2 d\theta = mV^2 d\theta = F_c d\theta \quad (a)$$

where V is the belt speed. Summing forces radially gives

$$\sum F_r = -(F + dF)\frac{d\theta}{2} - F\frac{d\theta}{2} + dN + dS = 0$$

Ignoring the higher-order term, we have

$$dN = F d\theta - dS \quad (b)$$

Summing forces tangentially gives

$$\sum F_t = -f dN - F + (F + dF) = 0$$

from which, incorporating Eqs. (a) and (b), we obtain

$$dF = f dN = f F d\theta - f dS = f F d\theta - f mr^2\omega^2 d\theta$$

or

$$\frac{dF}{d\theta} - fF = -fmr^2\omega^2 \quad (c)$$

The solution to this nonhomogeneous first-order linear differential equation is

$$F = A \exp(f\theta) + mr^2\omega^2 \quad (d)$$

where A is an arbitrary constant. Assuming θ starts at the loose side, the boundary condition that F at $\theta = 0$ equals F_2 gives $A = F_2 - mr^2\omega^2$. The solution is

$$F = (F_2 - mr^2\omega^2) \exp(f\theta) + mr^2\omega^2 \quad (17-5)$$

At the end of the angle of wrap ϕ , the tight side,

$$F|_{\theta=\phi} = F_1 = (F_2 - mr^2\omega^2) \exp(f\phi) + mr^2\omega^2 \quad (17-6)$$

Now we can write

$$\frac{F_1 - mr^2\omega^2}{F_2 - mr^2\omega^2} = \frac{F_1 - F_c}{F_2 - F_c} = \exp(f\phi) \quad (17-7)$$

where, from Eq. (a), $F_c = mr^2\omega^2$. It is also useful that Eq. (17-7) can be written as

$$F_1 - F_2 = (F_1 - F_c) \frac{\exp(f\phi) - 1}{\exp(f\phi)} \quad (17-8)$$

Now F_c is found as follows: with n being the rotational speed, in rev/min, of the pulley of diameter d , the belt speed is

$$V = \pi dn/12 \quad \text{ft/min}$$

The weight w of a foot of belt is given in terms of the weight density γ in lbf/in³ as $w = 12\gamma bt$ lbf/ft where b and t are in inches. F_c is written as

$$F_c = \frac{w}{g} \left(\frac{V}{60} \right)^2 = \frac{w}{32.17} \left(\frac{V}{60} \right)^2 \quad (e)$$

Figure 17-7 shows a free body of a pulley and part of the belt. The tight side tension F_1 and the loose side tension F_2 have the following additive components:

$$F_1 = F_i + F_c + \Delta F' = F_i + F_c + T/D \quad (f)$$

$$F_2 = F_i + F_c - \Delta F' = F_i + F_c - T/D \quad (g)$$

where F_i = initial tension

F_c = hoop tension due to centrifugal force

$\Delta F'$ = tension due to the transmitted torque T

D = diameter of the pulley

The difference between F_1 and F_2 is related to the pulley torque. Subtracting Eq. (g) from Eq. (f) gives

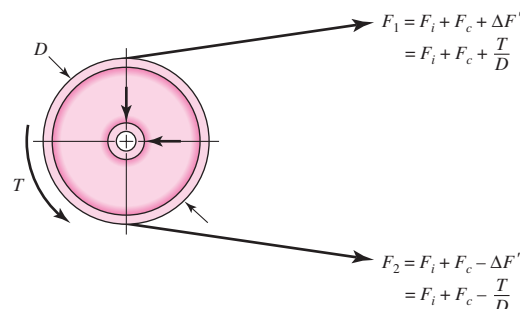
$$F_1 - F_2 = \frac{2T}{D} = \frac{T}{D/2} \quad (h)$$

Adding Eqs. (f) and (g) gives

$$F_1 + F_2 = 2F_i + 2F_c$$

Figure 17-7

Forces and torques on a pulley.



from which

$$F_i = \frac{F_1 + F_2}{2} - F_c \quad (i)$$

Dividing Eq. (i) by Eq. (h), manipulating, and using Eq. (17–7) gives

$$\begin{aligned} \frac{F_i}{T/D} &= \frac{(F_1 + F_2)/2 - F_c}{(F_1 - F_2)/2} = \frac{F_1 + F_2 - 2F_c}{F_1 - F_2} = \frac{(F_1 - F_c) + (F_2 - F_c)}{(F_1 - F_c) - (F_2 - F_c)} \\ &= \frac{(F_1 - F_c)/(F_2 - F_c) + 1}{(F_1 - F_c)/(F_2 - F_c) - 1} = \frac{\exp(f\phi) + 1}{\exp(f\phi) - 1} \end{aligned}$$

from which

$$F_i = \frac{T}{D} \frac{\exp(f\phi) + 1}{\exp(f\phi) - 1} \quad (17-9)$$

Equation (17–9) give us a fundamental insight into flat belting. If F_i equals zero, then T equals zero: no initial tension, no torque transmitted. The torque is in proportion to the initial tension. This means that if there is to be a satisfactory flat-belt drive, the initial tension must be (1) provided, (2) sustained, (3) in the proper amount, and (4) maintained by routine inspection.

From Eq. (f), incorporating Eq. (17–9) gives

$$\begin{aligned} F_1 &= F_i + F_c + \frac{T}{D} = F_c + F_i + F_i \frac{\exp(f\phi) - 1}{\exp(f\phi) + 1} \\ &= F_c + \frac{F_i[\exp(f\phi) + 1] + F_i[\exp(f\phi) - 1]}{\exp(f\phi) + 1} \end{aligned}$$

$$F_1 = F_c + F_i \frac{2 \exp(f\phi)}{\exp(f\phi) + 1} \quad (17-10)$$

From Eq. (g), incorporating Eq. (17–9) gives

$$\begin{aligned} F_2 &= F_i + F_c - \frac{T}{D} = F_c + F_i - F_i \frac{\exp(f\phi) - 1}{\exp(f\phi) + 1} \\ &= F_c + \frac{F_i[\exp(f\phi) + 1] - F_i[\exp(f\phi) - 1]}{\exp(f\phi) + 1} \end{aligned}$$

$$F_2 = F_c + F_i \frac{2}{\exp(f\phi) + 1} \quad (17-11)$$

Equation (17-7) is called the *belting equation*, but Eqs. (17-9), (17-10), and (17-11) reveal how belting works. We plot Eqs. (17-10) and (17-11) against F_i as abscissa. The initial tension needs to be sufficient so that the difference between the F_1 and F_2 curve is $2T/D$. With no torque transmitted, the least possible belt tension is $F_1 = F_2 = F_c$.

The transmitted horsepower is given by

$$H = \frac{(F_1 - F_2)V}{33\,000} \quad (j)$$

Manufacturers provide specifications for their belts that include allowable tension F_a (or stress σ_{all}), the tension being expressed in units of force per unit width. Belt life is usually several years. The severity of flexing at the pulley and its effect on life is reflected in a pulley correction factor C_p . Speed in excess of 600 ft/min and its effect on life is reflected in a velocity correction factor C_v . For polyamide and urethane belts use $C_v = 1$. For leather belts see Fig. 17-9. A service factor K_s is used for excursions of load from nominal, applied to the nominal power as $H_d = H_{\text{nom}} K_s n_d$, where n_d is the

Figure 17-8

Plot of initial tension F_i against belt tension F_1 or F_2 , showing the intercept F_c , the equations of the curves, and where $2T/D$ is to be found.

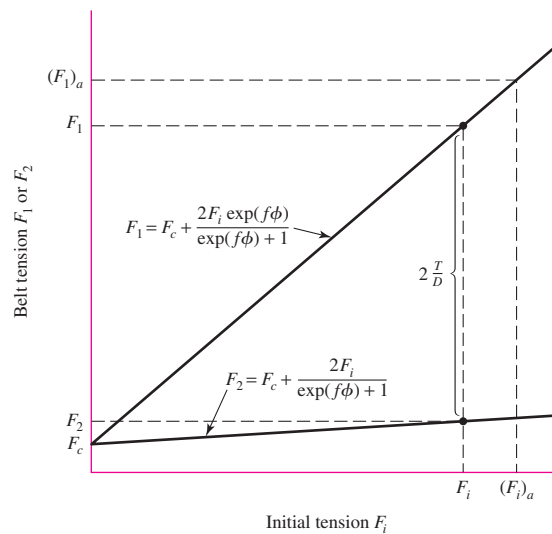
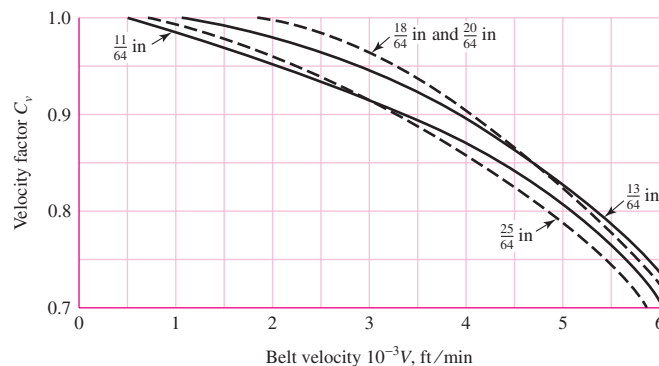


Figure 17-9

Velocity correction factor C_v for leather belts for various thicknesses. (Data source: Machinery's Handbook, 20th ed., Industrial Press, New York, 1976, p. 1047.)



design factor for exigencies. These effects are incorporated as follows:

$$(F_1)_a = bF_a C_p C_v \quad (17-12)$$

where $(F_1)_a$ = allowable largest tension, lbf

b = belt width, in

F_a = manufacturer's allowed tension, lbf/in

C_p = pulley correction factor (Table 17-4)

C_v = velocity correction factor

The steps in analyzing a flat-belt drive can include

- 1 Find $\exp(f\phi)$ from belt-drive geometry and friction
- 2 From belt geometry and speed find F_c
- 3 From $T = 63\,025H_{\text{nom}}K_s n_d/n$ find necessary torque
- 4 From torque T find the necessary $(F_1)_a - F_2 = 2T/D$
- 5 Find F_2 from $(F_1)_a - [(F_1)_a - F_2]$
- 6 From Eq. (i) find the necessary initial tension F_i
- 7 Check the friction development, $f' < f$. Use Eq. (17-7) solved for f' :

$$f' = \frac{1}{\phi} \ln \frac{(F_1)_a - F_c}{F_2 - F_c}$$

- 8 Find the factor of safety from $n_{fs} = H_a/(H_{\text{nom}}K_s)$

It is unfortunate that many of the available data on belting are from sources in which they are presented in a very simplistic manner. These sources use a variety of charts, nomographs, and tables to enable someone who knows nothing about belting to apply them. Little, if any, computation is needed for such a person to obtain valid results. Since a basic understanding of the process, in many cases, is lacking, there is no way this person can vary the steps in the process to obtain a better design.

Incorporating the available belt-drive data into a form that provides a good understanding of belt mechanics involves certain adjustments in the data. Because of this, the results from the analysis presented here will not correspond exactly with those of the sources from which they were obtained.

A moderate variety of belt materials, with some of their properties, are listed in Table 17-2. These are sufficient for solving a large variety of design and analysis problems. The design equation to be used is Eq. (j).

The values given in Table 17-2 for the allowable belt tension are based on a belt speed of 600 ft/min. For higher speeds, use Fig. 17-9 to obtain C_v values for leather belts. For polyamide and urethane belts, use $C_v = 1.0$.

The service factors K_s for V-belt drives, given in Table 17-15 in Sec. 17-3, are also recommended here for flat- and round-belt drives.

Minimum pulley sizes for the various belts are listed in Tables 17-2 and 17-3. The pulley correction factor accounts for the amount of bending or flexing of the belt and how this affects the life of the belt. For this reason it is dependent on the size and material of the belt used. See Table 17-4. Use $C_p = 1.0$ for urethane belts.

Flat-belt pulleys should be crowned to keep belts from running off the pulleys. If only one pulley is crowned, it should be the larger one. Both pulleys must be crowned whenever the pulley axes are not in a horizontal position. Use Table 17-5 for the crown height.

Table 17-2Properties of Some Flat- and Round-Belt Materials. (Diameter = d , thickness = t , width = w)

Material	Specification	Size, in	Minimum Pulley Diameter, in	Allowable Tension per Unit Width at 600 ft/min, lbf/in	Specific Weight, lbf/in ³	Coefficient of Friction
Leather	1 ply	$t = \frac{11}{64}$	3	30	0.035–0.045	0.4
		$t = \frac{13}{64}$	$3\frac{1}{2}$	33	0.035–0.045	0.4
	2 ply	$t = \frac{18}{64}$	$4\frac{1}{2}$	41	0.035–0.045	0.4
		$t = \frac{20}{64}$	6°	50	0.035–0.045	0.4
$t = \frac{23}{64}$		9°	60	0.035–0.045	0.4	
Polyamide ^b	F-0 ^c	$t = 0.03$	0.60	10	0.035	0.5
	F-1 ^c	$t = 0.05$	1.0	35	0.035	0.5
	F-2 ^c	$t = 0.07$	2.4	60	0.051	0.5
	A-2 ^c	$t = 0.11$	2.4	60	0.037	0.8
	A-3 ^c	$t = 0.13$	4.3	100	0.042	0.8
	A-4 ^c	$t = 0.20$	9.5	175	0.039	0.8
	A-5 ^c	$t = 0.25$	13.5	275	0.039	0.8
Urethane ^d	w = 0.50	$t = 0.062$	See	5.2 ^e	0.038–0.045	0.7
	w = 0.75	$t = 0.078$	Table	9.8 ^e	0.038–0.045	0.7
	w = 1.25	$t = 0.090$	17–3	18.9 ^e	0.038–0.045	0.7
	Round	$d = \frac{1}{4}$	See	8.3 ^e	0.038–0.045	0.7
		$d = \frac{3}{8}$	Table	18.6 ^e	0.038–0.045	0.7
		$d = \frac{1}{2}$	17–3	33.0 ^e	0.038–0.045	0.7
		$d = \frac{3}{4}$		74.3 ^e	0.038–0.045	0.7

^aAdd 2 in to pulley size for belts 8 in wide or more.^bSource: *Habasit Engineering Manual*, Habasit Belting, Inc., Chamblee (Atlanta), Ga.^cFriction cover of acrylonitrile-butadiene rubber on both sides.^dSource: Eagle Belting Co., Des Plaines, Ill.^eAt 6% elongation; 12% is maximum allowable value.**Table 17-3**Minimum Pulley Sizes for
Flat and Round Urethane
Belts. (Listed are the
Pulley Diameters in
Inches)Source: Eagle Belting Co.,
Des Plaines, Ill.

Belt Style	Belt Size, in	Ratio of Pulley Speed to Belt Length, rev/(ft · min)		
		Up to 250	250 to 499	500 to 1000
Flat	0.50 × 0.062	0.38	0.44	0.50
	0.75 × 0.078	0.50	0.63	0.75
	1.25 × 0.090	0.50	0.63	0.75
Round	$\frac{1}{4}$	1.50	1.75	2.00
	$\frac{3}{8}$	2.25	2.62	3.00
	$\frac{1}{2}$	3.00	3.50	4.00
	$\frac{3}{4}$	5.00	6.00	7.00

Table 17-4

Pulley Correction Factor C_p for Flat Belts*

Material	Small-Pulley Diameter, in					
	1.6 to 4	4.5 to 8	9 to 12.5	14, 16	18 to 31.5	Over 31.5
Leather	0.5	0.6	0.7	0.8	0.9	1.0
Polyamide, F-0	0.95	1.0	1.0	1.0	1.0	1.0
F-1	0.70	0.92	0.95	1.0	1.0	1.0
F-2	0.73	0.86	0.96	1.0	1.0	1.0
A-2	0.73	0.86	0.96	1.0	1.0	1.0
A-3	—	0.70	0.87	0.94	0.96	1.0
A-4	—	—	0.71	0.80	0.85	0.92
A-5	—	—	—	0.72	0.77	0.91

*Average values of C_p for the given ranges were approximated from curves in the *Habasit Engineering Manual*, Habasit Belting, Inc., Chamblee (Atlanta), Ga.

Table 17-5

Crown Height and ISO
Pulley Diameters for Flat
Belts*

ISO Pulley Diameter, in	Crown Height, in	ISO Pulley Diameter, in	Crown Height, in	
			$w \leq 10$ in	$w > 10$ in
1.6, 2, 2.5	0.012	12.5, 14	0.03	0.03
2.8, 3.15	0.012	12.5, 14	0.04	0.04
3.55, 4, 4.5	0.012	22.4, 25, 28	0.05	0.05
5, 5.6	0.016	31.5, 35.5	0.05	0.06
6.3, 7.1	0.020	40	0.05	0.06
8, 9	0.024	45, 50, 56	0.06	0.08
10, 11.2	0.030	63, 71, 80	0.07	0.10

*Crown should be rounded, not angled; maximum roughness is $R_a = AA\ 63\ \mu\text{in}$.

EXAMPLE 17-1

A polyamide A-3 flat belt 6 in wide is used to transmit 15 hp under light shock conditions where $K_s = 1.25$, and a factor of safety equal to or greater than 1.1 is appropriate. The pulley rotational axes are parallel and in the horizontal plane. The shafts are 8 ft apart. The 6-in driving pulley rotates at 1750 rev/min in such a way that the loose side is on top. The driven pulley is 18 in in diameter. See Fig. 17-10. The factor of safety is for unquantifiable exigencies.

- (a) Estimate the centrifugal tension F_c and the torque T .
- (b) Estimate the allowable F_1 , F_2 , F_i and allowable power H_a .
- (c) Estimate the factor of safety. Is it satisfactory?

Figure 17-10

The flat-belt drive of Ex. 17-1.



Solution (a) Eq. (17-1): $\phi = \theta_d = \pi - 2 \sin^{-1} \left[\frac{18 - 6}{2(8)12} \right] = 3.0165 \text{ rad}$

$$\exp(f\phi) = \exp[0.8(3.0165)] = 11.17$$

$$V = \pi(6)1750/12 = 2749 \text{ ft/min}$$

Table 17-2: $w = 12\gamma bt = 12(0.042)6(0.130) = 0.393 \text{ lbf/ft}$

Answer Eq. (e): $F_c = \frac{w}{g} \left(\frac{V}{60} \right)^2 = \frac{0.393}{32.17} \left(\frac{2749}{60} \right)^2 = 25.6 \text{ lbf}$

$$T = \frac{63\,025 H_{\text{nom}} K_s n_d}{n} = \frac{63\,025(15)1.25(1.1)}{1750}$$

Answer $= 742.8 \text{ lbf} \cdot \text{in}$

(b) The necessary $(F_1)_a - F_2$ to transmit the torque T , from Eq. (h), is

$$(F_1)_a - F_2 = \frac{2T}{d} = \frac{2(742.8)}{6} = 247.6 \text{ lbf}$$

From Table 17-2 $F_a = 100 \text{ lbf}$. For polyamide belts $C_v = 1$, and from Table 17-4 $C_p = 0.70$. From Eq. (17-12) the allowable largest belt tension $(F_1)_a$ is

Answer $(F_1)_a = b F_a C_p C_v = 6(100)0.70(1) = 420 \text{ lbf}$

then

Answer $F_2 = (F_1)_a - [(F_1)_a - F_2] = 420 - 247.6 = 172.4 \text{ lbf}$

and from Eq. (i)

$$F_i = \frac{(F_1)_a + F_2}{2} - F_c = \frac{420 + 172.4}{2} - 25.6 = 270.6 \text{ lbf}$$

Answer The combination $(F_1)_a$, F_2 , and F_i will transmit the design power of $15(1.25)(1.1) = 20.6 \text{ hp}$ and protect the belt. We check the friction development by solving Eq. (17-7) for f' :

$$f' = \frac{1}{\phi} \ln \frac{(F_1)_a - F_c}{F_2 - F_c} = \frac{1}{3.0165} \ln \frac{420 - 25.6}{172.4 - 25.6} = 0.328$$

From Table 17-2, $f = 0.8$. Since $f' < f$, that is, $0.328 < 0.80$, there is no danger of slipping.

(c)

Answer $n_{fs} = \frac{H}{H_{\text{nom}} K_s} = \frac{20.6}{15(1.25)} = 1.1 \quad (\text{as expected})$

Answer The belt is satisfactory and the maximum allowable belt tension exists. If the initial tension is maintained, the capacity is the design power of 20.6 hp.

Initial tension is the key to the functioning of the flat belt as intended. There are ways of controlling initial tension. One way is to place the motor and drive pulley on a pivoted mounting plate so that the weight of the motor, pulley, and mounting plate and a share of the belt weight induces the correct initial tension and maintains it. A second way is use of a spring-loaded idler pulley, adjusted to the same task. Both of these methods accommodate to temporary or permanent belt stretch. See Fig. 17–11.

Because flat belts were used for long center-to-center distances, the weight of the belt itself can provide the initial tension. The static belt deflects to an approximate catenary curve, and the dip from a straight belt can be measured against a stretched music wire. This provides a way of measuring and adjusting the dip. From catenary theory the dip is related to the initial tension by

$$d = \frac{12L^2w}{8F_i} = \frac{3L^2w}{2F_i} \quad (17-13)$$

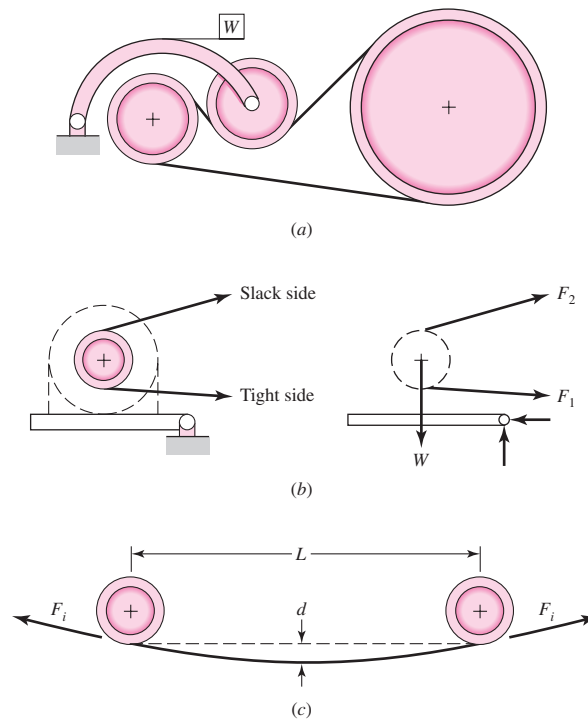
where $d = \text{dip, in}$
 $L = \text{center-to-center distance, ft}$
 $w = \text{weight per foot of the belt, lbf/ft}$
 $F_i = \text{initial tension, lbf}$

In Ex. 17–1 the dip corresponding to a 270.6-lb initial tension is

$$d = \frac{3(8^2)0.393}{2(270.6)} = 0.14 \text{ in}$$

Figure 17-11

Belt-tensioning schemes.
 (a) Weighted idler pulley.
 (b) Pivoted motor mount.
 (c) Catenary-induced tension.



A decision set for a flat belt can be

- Function: power, speed, durability, reduction, service factor, C
- Design factor: n_d
- Initial tension maintenance
- Belt material
- Drive geometry, d, D
- Belt thickness: t
- Belt width: b

Depending on the problem, some or all of the last four could be design variables. Belt cross-sectional area is really the design decision, but available belt thicknesses and widths are discrete choices. Available dimensions are found in suppliers' catalogs.

EXAMPLE 17-2

Design a flat-belt drive to connect horizontal shafts on 16-ft centers. The velocity ratio is to be 2.25:1. The angular speed of the small driving pulley is 860 rev/min, and the nominal power transmission is to be 60 hp under very light shock.

Solution

- Function: $H_{\text{nom}} = 60$ hp, 860 rev/min, 2.25:1 ratio, $K_s = 1.15$, $C = 16$ ft
- Design factor: $n_d = 1.05$
- Initial tension maintenance: catenary
- Belt material: polyamide
- Drive geometry, d, D
- Belt thickness: t
- Belt width: b

The last four could be design variables. Let's make a few more a priori decisions.

Decision

$d = 16$ in, $D = 2.25d = 2.25(16) = 36$ in.

Decision

Use polyamide A-3 belt; therefore $t = 0.13$ in and $C_v = 1$.
Now there is one design decision remaining to be made, the belt width b .

Table 17-2: $\gamma = 0.042$ lbf/in³ $f = 0.8$ $F_a = 100$ lbf/in at 600 rev/min

Table 17-4: $C_p = 0.94$

Eq. (17-12): $F_{1a} = b(100)0.94(1) = 94.0b$ lbf

(1)

$$H_d = H_{\text{nom}} K_s n_d = 60(1.15)1.05 = 72.5 \text{ hp}$$

$$T = \frac{63\,025 H_d}{n} = \frac{63\,025(72.5)}{860} = 5310 \text{ lbf} \cdot \text{in}$$

Estimate $\exp(f\phi)$ for full friction development:

$$\text{Eq. (17-1):} \quad \phi = \theta_d = \pi - 2 \sin^{-1} \frac{36 - 16}{2(16)12} = 3.037 \text{ rad}$$

$$\exp(f\phi) = \exp[0.80(3.037)] = 11.35$$

Estimate centrifugal tension F_c in terms of belt width b :

$$w = 12\gamma bt = 12(0.042)b(0.13) = 0.0655b \text{ lbf/ft}$$

$$V = \pi dn/12 = \pi(16)860/12 = 3602 \text{ ft/min}$$

$$\text{Eq. (e): } F_c = \frac{w}{g} \left(\frac{V}{60} \right)^2 = \frac{0.0655b}{32.17} \left(\frac{3602}{60} \right)^2 = 7.34b \text{ lbf} \quad (2)$$

For design conditions, that is, at H_d power level, using Eq. (h) gives

$$(F_1)_a - F_2 = 2T/d = 2(5310)/16 = 664 \text{ lbf} \quad (3)$$

$$F_2 = (F_1)_a - [(F_1)_a - F_2] = 94.0b - 664 \text{ lbf} \quad (4)$$

Using Eq. (i) gives

$$F_i = \frac{(F_1)_a + F_2}{2} - F_c = \frac{94.0b + 94.0b - 664}{2} - 7.34b = 86.7b - 332 \text{ lbf} \quad (5)$$

Place friction development at its highest level, using Eq. (17-7):

$$f\phi = \ln \frac{(F_1)_a - F_c}{F_2 - F_c} = \ln \frac{94.0b - 7.34b}{94.0b - 664 - 7.34b} = \ln \frac{86.7b}{86.7b - 664}$$

Solving the preceding equation for belt width b at which friction is fully developed gives

$$b = \frac{664}{86.7} \frac{\exp(f\phi)}{\exp(f\phi) - 1} = \frac{664}{86.7} \frac{11.38}{11.38 - 1} = 8.40 \text{ in}$$

A belt width greater than 8.40 in will develop friction less than $f = 0.80$. The manufacturer's data indicate that the next available larger width is 10-in.

Decision

Use 10-in-wide belt.

It follows that for a 10-in-wide belt

$$\text{Eq. (2): } F_c = 7.34(10) = 73.4 \text{ lbf}$$

$$\text{Eq. (1): } (F_1)_a = 94(10) = 940 \text{ lbf}$$

$$\text{Eq. (4): } F_2 = 94(10) - 664 = 276 \text{ lbf}$$

$$\text{Eq. (5): } F_i = 86.7(10) - 332 = 535 \text{ lbf}$$

The transmitted power, from Eq. (3), is

$$H_t = \frac{[(F_1)_a - F_2]V}{33\,000} = \frac{664(3602)}{33\,000} = 72.5 \text{ hp}$$

and the level of friction development f' , from Eq. (17-7) is

$$f' = \frac{1}{\phi} \ln \frac{(F_1)_a - F_c}{F_2 - F_c} = \frac{1}{3.037} \ln \frac{940 - 73.4}{276 - 73.4} = 0.479$$

which is less than $f = 0.8$, and thus is satisfactory. Had a 9-in belt width been available, the analysis would show $(F_1)_a = 846$ lbf, $F_2 = 182$ lbf, $F_i = 448$ lbf, and $f' = 0.63$. With a figure of merit available reflecting cost, thicker belts (A-4 or A-5) could be examined to ascertain which of the satisfactory alternatives is best. From Eq. (17-13) the catenary dip is

$$d = \frac{3L^2w}{2F_i} = \frac{3(15^2)0.0655(10)}{2(535)} = 0.413 \text{ in}$$

Figure 17-12

Flat-belt tensions.

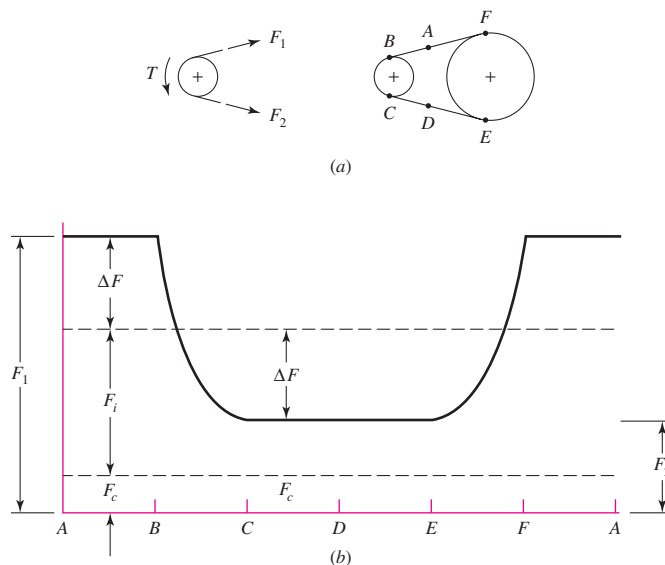


Figure 17-12 illustrates the variation of flexible flat-belt tensions at some cardinal points during a belt pass.

Flat Metal Belts

Thin flat metal belts with their attendant strength and geometric stability could not be fabricated until laser welding and thin rolling technology made possible belts as thin as 0.002 in and as narrow as 0.026 in. The introduction of perforations allows no-slip applications. Thin metal belts exhibit

- High strength-to-weight ratio
- Dimensional stability
- Accurate timing
- Usefulness to temperatures up to 700°F
- Good electrical and thermal conduction properties

In addition, stainless steel alloys offer “inert,” nonabsorbent belts suitable to hostile (corrosive) environments, and can be made sterile for food and pharmaceutical applications.

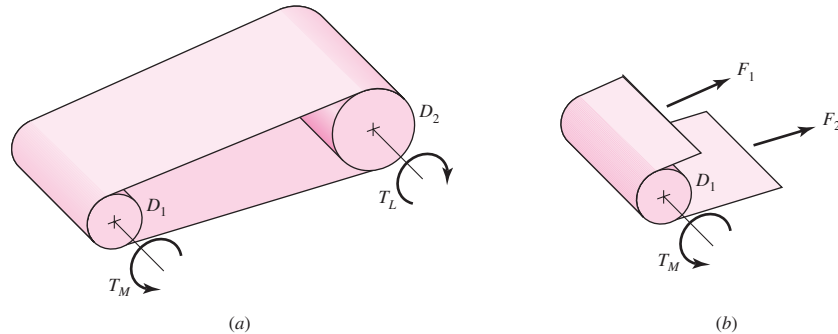
Thin metal belts can be classified as friction drives, timing or positioning drives, or tape drives. Among friction drives are plain, metal-coated, and perforated belts. Crowned pulleys are used to compensate for tracking errors.

Figure 17-13 shows a thin flat metal belt with the tight tension F_1 and the slack side tension F_2 revealed. The relationship between F_1 and F_2 and the driving torque T is the same as in Eq. (h). Equations (17-9), (17-10), and (17-11) also apply. The largest allowable tension, as in Eq. (17-12), is posed in terms of stress in metal belts. A bending stress is created by making the belt conform to the pulley, and its tensile magnitude σ_b is given by

$$\sigma_b = \frac{Et}{(1 - \nu^2)D} = \frac{E}{(1 - \nu^2)(D/t)} \quad (17-14)$$

Figure 17-13

Metal-belt tensions and torques.



where E = Young's modulus
 t = belt thickness
 ν = Poisson's ratio
 D = pulley diameter

The tensile stresses $(\sigma)_1$ and $(\sigma)_2$ imposed by the belt tensions F_1 and F_2 are

$$(\sigma)_1 = F_1/(bt) \quad \text{and} \quad (\sigma)_2 = F_2/(bt)$$

The largest tensile stress is $(\sigma_b)_1 + F_1/(bt)$ and the smallest is $(\sigma_b)_2 + F_2/(bt)$. During a belt pass both levels of stress appear.

Although the belts are of simple geometry, the method of Marin is not used because the condition of the butt weldment (to form the loop) is not accurately known, and the testing of coupons is difficult. The belts are run to failure on two equal-sized pulleys. Information concerning fatigue life, as shown in Table 17-6, is obtainable. Tables 17-7 and 17-8 give additional information.

Table 17-6 shows metal belt life expectancies for a stainless steel belt. From Eq. (17-14) with $E = 28$ Mpsi and $\nu = 0.29$, the bending stresses corresponding to the four entries of the table are 48 914, 76 428, 91 805, and 152 855 psi. Using a natural log transformation on stress and passes shows that the regression line ($r = -0.96$) is

$$\sigma = 14\,169\,982N^{-0.407} = 14.17(10^6)N_p^{-0.407} \quad (17-15)$$

where N_p is the number of belt passes.

Table 17-6

Belt Life for Stainless
Steel Friction Drives*

$\frac{D}{t}$	Belt Passes
625	$\geq 10^6$
400	$0.500 \cdot 10^6$
333	$0.165 \cdot 10^6$
200	$0.085 \cdot 10^6$

*Data courtesy of Belt Technologies, Agawam, Mass.

Table 17-7Minimum Pulley
Diameter*

Belt Thickness, in	Minimum Pulley Diameter, in
0.002	1.2
0.003	1.8
0.005	3.0
0.008	5.0
0.010	6.0
0.015	10
0.020	12.5
0.040	25.0

*Data courtesy of Belt Technologies, Agawam, Mass.

Table 17-8Typical Material
Properties, Metal Belts*

Alloy	Yield Strength, kpsi	Young's Modulus, Mpsi	Poisson's Ratio
301 or 302 stainless steel	175	28	0.285
BeCu	170	17	0.220
1075 or 1095 carbon steel	230	30	0.287
Titanium	150	15	—
Inconel	160	30	0.284

*Data courtesy of Belt Technologies, Agawam, Mass.

The selection of a metal flat belt can consist of the following steps:

- 1 Find $\exp(f\phi)$ from geometry and friction
- 2 Find endurance strength

$$S_f = 14.17(10^6)N_p^{-0.407} \quad \text{301, 302 stainless}$$

$$S_f = S_y/3 \quad \text{others}$$

- 3 Allowable tension

$$F_{1a} = \left[S_f - \frac{Et}{(1-\nu^2)D} \right] tb = ab$$

- 4 $\Delta F = 2T/D$

$$5 \quad F_2 = F_{1a} - \Delta F = ab - \Delta F$$

$$6 \quad F_i = \frac{F_{1a} + F_2}{2} = \frac{ab + ab - \Delta F}{2} = ab - \frac{\Delta F}{2}$$

$$7 \quad b_{\min} = \frac{\Delta F}{a} \frac{\exp(f\phi)}{\exp(f\phi) - 1}$$

- 8 Choose $b > b_{\min}$, $F_1 = ab$, $F_2 = ab - \Delta F$, $F_i = ab - \Delta F/2$, $T = \Delta F D/2$

9 Check frictional development f' :

$$f' = \frac{1}{\phi} \ln \frac{F_1}{F_2} \quad f' < f$$

EXAMPLE 17-3

A friction-drive stainless steel metal belt runs over two 4-in metal pulleys ($f = 0.35$). The belt thickness is to be 0.003 in. For a life exceeding 10^6 belt passes with smooth torque ($K_s = 1$), (a) select the belt if the torque is to be 30 lbf · in, and (b) find the initial tension F_i .

Solution (a) From step 1, $\phi = \theta_d = \pi$, therefore $\exp(0.35\pi) = 3.00$. From step 2,

$$(S_f)_{10^6} = 14.17(10^6)(10^6)^{-0.407} = 51\,210 \text{ psi}$$

From steps 3, 4, 5, and 6,

$$F_{1a} = \left[51\,210 - \frac{28(10^6)0.003}{(1 - 0.285^2)4} \right] 0.003b = 85.1b \text{ lbf} \quad (1)$$

$$\Delta F = 2T/D = 2(30)/4 = 15 \text{ lbf}$$

$$F_2 = F_{1a} - \Delta F = 85.1b - 15 \text{ lbf} \quad (2)$$

$$F_i = \frac{F_{1a} + F_2}{2} = \frac{85.1b + 15}{2} \text{ lbf} \quad (3)$$

From step 7,

$$b_{\min} = \frac{\Delta F}{a} \frac{\exp(f\phi)}{\exp(f\phi) - 1} = \frac{15}{85.1} \frac{3.00}{3.00 - 1} = 0.264 \text{ in}$$

Decision Select an available 0.75-in-wide belt 0.003 in thick.

$$\text{Eq. (1):} \quad F_1 = 85.1(0.75) = 63.8 \text{ lbf}$$

$$\text{Eq. (2):} \quad F_2 = 85.1(0.75) - 15 = 48.8 \text{ lbf}$$

$$\text{Eq. (3):} \quad F_i = (63.8 + 48.8)/2 = 56.3 \text{ lbf}$$

$$f' = \frac{1}{\phi} \ln \frac{F_1}{F_2} = \frac{1}{\pi} \ln \frac{63.8}{48.8} = 0.0853$$

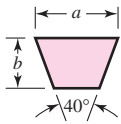
Note $f' < f$, that is, $0.0853 < 0.35$.

17-3 V Belts

The cross-sectional dimensions of V belts have been standardized by manufacturers, with each section designated by a letter of the alphabet for sizes in inch dimensions. Metric sizes are designated in numbers. Though these have not been included here, the procedure for analyzing and designing them is the same as presented here. Dimensions, minimum sheave diameters, and the horsepower range for each of the lettered sections are listed in Table 17-9.

Table 17-9

Standard V-Belt Sections



Belt Section	Width a , in	Thickness b , in	Minimum Sheave Diameter, in	hp Range, One or More Belts
A	$\frac{1}{2}$	$\frac{11}{32}$	3.0	$\frac{1}{4}$ –10
B	$\frac{21}{32}$	$\frac{7}{16}$	5.4	1–25
C	$\frac{7}{8}$	$\frac{17}{32}$	9.0	15–100
D	$1\frac{1}{4}$	$\frac{3}{4}$	13.0	50–250
E	$1\frac{1}{2}$	1	21.6	100 and up

Table 17-10Inside Circumferences of
Standard V Belts

Section	Circumference, in
A	26, 31, 33, 35, 38, 42, 46, 48, 51, 53, 55, 57, 60, 62, 64, 66, 68, 71, 75, 78, 80, 85, 90, 96, 105, 112, 120, 128
B	35, 38, 42, 46, 48, 51, 53, 55, 57, 60, 62, 64, 65, 66, 68, 71, 75, 78, 79, 81, 83, 85, 90, 93, 97, 100, 103, 105, 112, 120, 128, 131, 136, 144, 158, 173, 180, 195, 210, 240, 270, 300
C	51, 60, 68, 75, 81, 85, 90, 96, 105, 112, 120, 128, 136, 144, 158, 162, 173, 180, 195, 210, 240, 270, 300, 330, 360, 390, 420
D	120, 128, 144, 158, 162, 173, 180, 195, 210, 240, 270, 300, 330, 360, 390, 420, 480, 540, 600, 660
E	180, 195, 210, 240, 270, 300, 330, 360, 390, 420, 480, 540, 600, 660

Table 17-11

Length Conversion Dimensions (Add the Listed Quantity to the Inside Circumference to Obtain the Pitch Length in Inches)

Belt section	A	B	C	D	E
Quantity to be added	1.3	1.8	2.9	3.3	4.5

To specify a V belt, give the belt-section letter, followed by the inside circumference in inches (standard circumferences are listed in Table 17-10). For example, B75 is a B-section belt having an inside circumference of 75 in.

Calculations involving the belt length are usually based on the pitch length. For any given belt section, the pitch length is obtained by adding a quantity to the inside circumference (Tables 17-10 and 17-11). For example, a B75 belt has a pitch length of 76.8 in. Similarly, calculations of the velocity ratios are made using the pitch diameters of the sheaves, and for this reason the stated diameters are usually understood to be the pitch diameters even though they are not always so specified.

The groove angle of a sheave is made somewhat smaller than the belt-section angle. This causes the belt to wedge itself into the groove, thus increasing friction. The exact value of this angle depends on the belt section, the sheave diameter, and the angle of contact. If it is made too much smaller than the belt, the force required to pull the belt out of the groove as the belt leaves the pulley will be excessive. Optimum values are given in the commercial literature.

The minimum sheave diameters have been listed in Table 17–9. For best results, a V belt should be run quite fast: 4000 ft/min is a good speed. Trouble may be encountered if the belt runs much faster than 5000 ft/min or much slower than 1000 ft/min.

The *pitch length* L_p and the center-to-center distance C are

$$L_p = 2C + \pi(D + d)/2 + (D - d)^2/(4C) \quad (17-16a)$$

$$C = 0.25 \left\{ \left[L_p - \frac{\pi}{2}(D + d) \right] + \sqrt{\left[L_p - \frac{\pi}{2}(D + d) \right]^2 - 2(D - d)^2} \right\} \quad (17-16b)$$

where D = pitch diameter of the large sheave and d = pitch diameter of the small sheave.

In the case of flat belts, there is virtually no limit to the center-to-center distance. Long center-to-center distances are not recommended for V belts because the excessive vibration of the slack side will shorten the belt life materially. In general, the center-to-center distance should be no greater than 3 times the sum of the sheave diameters and no less than the diameter of the larger sheave. Link-type V belts have less vibration, because of better balance, and hence may be used with longer center-to-center distances.

The basis for power ratings of V belts depends somewhat on the manufacturer; it is not often mentioned quantitatively in vendors' literature but is available from vendors. The basis may be a number of hours, 24 000, for example, or a life of 10^8 or 10^9 belt passes. Since the number of belts must be an integer, an undersized belt set that is augmented by one belt can be substantially oversized. Table 17–12 gives power ratings of standard V belts.

The rating, whether in terms of hours or belt passes, is for a belt running on equal-diameter sheaves (180° of wrap), of moderate length, and transmitting a steady load. Deviations from these laboratory test conditions are acknowledged by multiplicative adjustments. If the tabulated power of a belt for a C-section belt is 9.46 hp for a 12-in-diameter sheave at a peripheral speed of 3000 ft/min (Table 17–12), then, when the belt is used under other conditions, the tabulated value H_{tab} is adjusted as follows:

$$H_a = K_1 K_2 H_{\text{tab}} \quad (17-17)$$

where H_a = allowable power, per belt, Table 17–12

K_1 = angle-of-wrap correction factor, Table 17–13

K_2 = belt length correction factor, Table 17–14

The allowable power can be near to H_{tab} , depending upon circumstances.

In a V belt the effective coefficient of friction f' is $f/\sin(\phi/2)$, which amounts to an augmentation by a factor of about 3 due to the grooves. The effective coefficient of friction f' is sometimes tabulated against *sheave* groove angles of 30° , 34° , and 38° , the tabulated values being 0.50, 0.45, and 0.40, respectively, revealing a belt material-on-metal coefficient of friction of 0.13 for each case. The Gates Rubber Company declares its effective coefficient of friction to be 0.5123 for grooves. Thus

$$\frac{F_1 - F_c}{F_2 - F_c} = \exp(0.5123\phi) \quad (17-18)$$

The design power is given by

$$H_d = H_{\text{nom}} K_s n_d \quad (17-19)$$

where H_{nom} is the nominal power, K_s is the service factor given in Table 17–15, and n_d is the design factor. The number of belts, N_b , is usually the next higher integer to H_d/H_a .

Table 17-12Horsepower Ratings of
Standard V Belts

Belt Section	Sheave Pitch Diameter, in	Belt Speed, ft/min				
		1000	2000	3000	4000	5000
A	2.6	0.47	0.62	0.53	0.15	
	3.0	0.66	1.01	1.12	0.93	0.38
	3.4	0.81	1.31	1.57	1.53	1.12
	3.8	0.93	1.55	1.92	2.00	1.71
	4.2	1.03	1.74	2.20	2.38	2.19
	4.6	1.11	1.89	2.44	2.69	2.58
	5.0 and up	1.17	2.03	2.64	2.96	2.89
B	4.2	1.07	1.58	1.68	1.26	0.22
	4.6	1.27	1.99	2.29	2.08	1.24
	5.0	1.44	2.33	2.80	2.76	2.10
	5.4	1.59	2.62	3.24	3.34	2.82
	5.8	1.72	2.87	3.61	3.85	3.45
	6.2	1.82	3.09	3.94	4.28	4.00
	6.6	1.92	3.29	4.23	4.67	4.48
7.0 and up	2.01	3.46	4.49	5.01	4.90	
C	6.0	1.84	2.66	2.72	1.87	
	7.0	2.48	3.94	4.64	4.44	3.12
	8.0	2.96	4.90	6.09	6.36	5.52
	9.0	3.34	5.65	7.21	7.86	7.39
	10.0	3.64	6.25	8.11	9.06	8.89
	11.0	3.88	6.74	8.84	10.0	10.1
	12.0 and up	4.09	7.15	9.46	10.9	11.1
D	10.0	4.14	6.13	6.55	5.09	1.35
	11.0	5.00	7.83	9.11	8.50	5.62
	12.0	5.71	9.26	11.2	11.4	9.18
	13.0	6.31	10.5	13.0	13.8	12.2
	14.0	6.82	11.5	14.6	15.8	14.8
	15.0	7.27	12.4	15.9	17.6	17.0
	16.0	7.66	13.2	17.1	19.2	19.0
17.0 and up	8.01	13.9	18.1	20.6	20.7	
E	16.0	8.68	14.0	17.5	18.1	15.3
	18.0	9.92	16.7	21.2	23.0	21.5
	20.0	10.9	18.7	24.2	26.9	26.4
	22.0	11.7	20.3	26.6	30.2	30.5
	24.0	12.4	21.6	28.6	32.9	33.8
	26.0	13.0	22.8	30.3	35.1	36.7
	28.0 and up	13.4	23.7	31.8	37.1	39.1

That is,

$$N_b \geq \frac{H_d}{H_a} \quad N_b = 1, 2, 3, \dots \quad (17-20)$$

Designers work on a per-belt basis.

The flat-belt tensions shown in Fig. 17-12 ignored the tension induced by bending the belt about the pulleys. This is more pronounced with V belts, as shown in Fig. 17-14.

The centrifugal tension F_c is given by

$$F_c = K_c \left(\frac{V}{1000} \right)^2 \quad (17-21)$$

where K_c is from Table 17-16.

Table 17-13

Angle of Contact
Correction Factor K_1 for
VV* and V-Flat Drives

$\frac{D-d}{C}$	θ , deg	VV	K_1	V Flat
0.00	180	1.00		0.75
0.10	174.3	0.99		0.76
0.20	166.5	0.97		0.78
0.30	162.7	0.96		0.79
0.40	156.9	0.94		0.80
0.50	151.0	0.93		0.81
0.60	145.1	0.91		0.83
0.70	139.0	0.89		0.84
0.80	132.8	0.87		0.85
0.90	126.5	0.85		0.85
1.00	120.0	0.82		0.82
1.10	113.3	0.80		0.80
1.20	106.3	0.77		0.77
1.30	98.9	0.73		0.73
1.40	91.1	0.70		0.70
1.50	82.8	0.65		0.65

*A curvefit for the VV column in terms of θ is
 $K_1 = 0.143\,543 + 0.007\,46\,8\,\theta - 0.000\,015\,052\,\theta^2$
 in the range $90^\circ \leq \theta \leq 180^\circ$.

Table 17-14

Belt-Length Correction
Factor K_2^*

Length Factor	Nominal Belt Length, in				
	A Belts	B Belts	C Belts	D Belts	E Belts
0.85	Up to 35	Up to 46	Up to 75	Up to 128	
0.90	38–46	48–60	81–96	144–162	Up to 195
0.95	48–55	62–75	105–120	173–210	210–240
1.00	60–75	78–97	128–158	240	270–300
1.05	78–90	105–120	162–195	270–330	330–390
1.10	96–112	128–144	210–240	360–420	420–480
1.15	120 and up	158–180	270–300	480	540–600
1.20		195 and up	330 and up	540 and up	660

*Multiply the rated horsepower per belt by this factor to obtain the corrected horsepower.

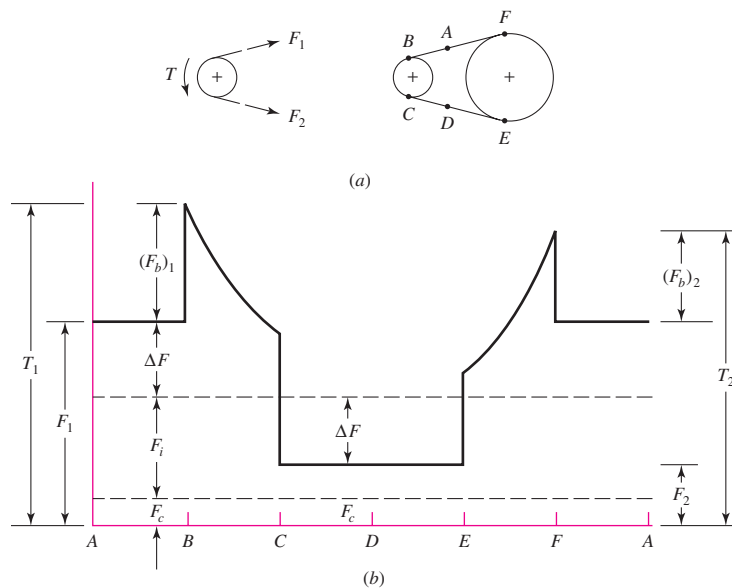
Table 17-15

Suggested Service
Factors K_S for V-Belt
Drives

Driven Machinery	Source of Power	
	Normal Torque Characteristic	High or Nonuniform Torque
Uniform	1.0 to 1.2	1.1 to 1.3
Light shock	1.1 to 1.3	1.2 to 1.4
Medium shock	1.2 to 1.4	1.4 to 1.6
Heavy shock	1.3 to 1.5	1.5 to 1.8

Figure 17-14

V-belt tensions.

**Table 17-16**

Some V-Belt Parameters*

Belt Section	K_b	K_c
A	220	0.561
B	576	0.965
C	1 600	1.716
D	5 680	3.498
E	10 850	5.041
3V	230	0.425
5V	1098	1.217
8V	4830	3.288

*Data courtesy of Gates Rubber Co., Denver, Colo.

The power that is transmitted per belt is based on $\Delta F = F_1 - F_2$, where

$$\Delta F = \frac{63\,025 H_d / N_b}{n(d/2)} \quad (17-22)$$

then from Eq. (17-8) the largest tension F_1 is given by

$$F_1 = F_c + \frac{\Delta F \exp(f\phi)}{\exp(f\phi) - 1} \quad (17-23)$$

From the definition of ΔF , the least tension F_2 is

$$F_2 = F_1 - \Delta F \quad (17-24)$$

From Eq. (j) in Sec. 17-2

$$F_i = \frac{F_1 + F_2}{2} - F_c \quad (17-25)$$

The factor of safety is

$$n_{fs} = \frac{H_a N_b}{H_{\text{nom}} K_s} \quad (17-26)$$

Durability (life) correlations are complicated by the fact that the bending induces flexural stresses in the belt; the corresponding belt tension that induces the same maximum tensile stress is F_{b1} at the driving sheave and F_{b2} at the driven pulley. These equivalent tensions are added to F_1 as

$$T_1 = F_1 + (F_b)_1 = F_1 + \frac{K_b}{d}$$

$$T_2 = F_1 + (F_b)_2 = F_1 + \frac{K_b}{D}$$

where K_b is given in Table 17–16. The equation for the tension versus pass trade-off used by the Gates Rubber Company is of the form

$$T^b N_P = K^b$$

where N_P is the number of passes and b is approximately 11. See Table 17–17. The Miner rule is used to sum damage incurred by the two tension peaks:

$$\frac{1}{N_P} = \left(\frac{K}{T_1}\right)^{-b} + \left(\frac{K}{T_2}\right)^{-b}$$

or

$$N_P = \left[\left(\frac{K}{T_1}\right)^{-b} + \left(\frac{K}{T_2}\right)^{-b} \right]^{-1} \quad (17-27)$$

The lifetime t in hours is given by

$$t = \frac{N_P L_P}{720V} \quad (17-28)$$

Table 17-17

Durability Parameters for
Some V-Belt Sections

Source: M. E. Spotts, *Design
of Machine Elements*, 6th ed.
Prentice Hall, Englewood
Cliffs, N.J., 1985.

Belt Section	10 ⁸ to 10 ⁹ Force Peaks		10 ⁹ to 10 ¹⁰ Force Peaks		Minimum Sheave Diameter, in
	K	b	K	b	
A	674	11.089			3.0
B	1193	10.926			5.0
C	2038	11.173			8.5
D	4208	11.105			13.0
E	6061	11.100			21.6
3V	728	12.464	1062	10.153	2.65
5V	1654	12.593	2394	10.283	7.1
8V	3638	12.629	5253	10.319	12.5

The constants K and b have their ranges of validity. If $N_P > 10^9$, report that $N_P = 10^9$ and $t > N_P L_p / (720V)$ without placing confidence in numerical values beyond the validity interval. See the statement about N_P and t near the conclusion of Ex. 17–4.

The analysis of a V-belt drive can consist of the following steps:

- Find V , L_p , C , ϕ , and $\exp(0.5123\phi)$
- Find H_d , H_a , and N_b from H_d/H_a and round up
- Find F_c , ΔF , F_1 , F_2 , and F_i , and n_{fs}
- Find belt life in number of passes, or hours, if possible

EXAMPLE 17–4

A 10-hp split-phase motor running at 1750 rev/min is used to drive a rotary pump, which operates 24 hours per day. An engineer has specified a 7.4-in small sheave, an 11-in large sheave, and three B112 belts. The service factor of 1.2 was augmented by 0.1 because of the continuous-duty requirement. Analyze the drive and estimate the belt life in passes and hours.

Solution

The peripheral speed V of the belt is

$$V = \pi dn/12 = \pi(7.4)1750/12 = 3390 \text{ ft/min}$$

Table 17–11: $L_p = L + L_c = 112 + 1.8 = 113.8$ in

$$\begin{aligned} \text{Eq. (17–16b): } C &= 0.25 \left\{ \left[113.8 - \frac{\pi}{2}(11 + 7.4) \right] \right. \\ &\quad \left. + \sqrt{\left[113.8 - \frac{\pi}{2}(11 + 7.4) \right]^2 - 2(11 - 7.4)^2} \right\} \\ &= 42.4 \text{ in} \end{aligned}$$

$$\begin{aligned} \text{Eq. (17–1): } \phi = \theta_d &= \pi - 2 \sin^{-1}(11 - 7.4)/[2(42.4)] = 3.057 \text{ rad} \\ \exp[0.5123(3.057)] &= 4.788 \end{aligned}$$

Interpolating in Table 17–12 for $V = 3390$ ft/min gives $H_{\text{tab}} = 4.693$ hp. The wrap angle in degrees is $3.057(180)/\pi = 175^\circ$. From Table 17–13, $K_1 = 0.99$. From Table 17–14, $K_2 = 1.05$. Thus, from Eq. (17–17),

$$H_a = K_1 K_2 H_{\text{tab}} = 0.99(1.05)4.693 = 4.878 \text{ hp}$$

$$\text{Eq. (17–19): } H_d = H_{\text{nom}} K_s n_d = 10(1.2 + 0.1)(1) = 13 \text{ hp}$$

$$\text{Eq. (17–20): } N_b \geq H_d/H_a = 13/4.878 = 2.67 \rightarrow 3$$

From Table 17–16, $K_c = 0.965$. Thus, from Eq. (17–21),

$$F_c = 0.965(3390/1000)^2 = 11.1 \text{ lbf}$$

$$\text{Eq. (17–22): } \Delta F = \frac{63\,025(13)/3}{1750(7.4/2)} = 42.2 \text{ lbf}$$

$$\text{Eq. (17–23): } F_1 = 11.1 + \frac{42.2(4.788)}{4.788 - 1} = 64.4 \text{ lbf}$$

$$\text{Eq. (17-24):} \quad F_2 = F_1 - \Delta F = 64.4 - 42.2 = 22.2 \text{ lbf}$$

$$\text{Eq. (17-25):} \quad F_i = \frac{64.4 + 22.2}{2} - 11.1 = 32.2 \text{ lbf}$$

$$\text{Eq. (17-26):} \quad n_{fs} = \frac{H_a N_b}{H_{\text{nom}} K_s} = \frac{4.878(3)}{10(1.3)} = 1.13$$

Life: From Table 17-16, $K_b = 576$.

$$F_{b1} = \frac{K_b}{d} = \frac{576}{7.4} = 77.8 \text{ lbf}$$

$$F_{b2} = \frac{576}{11} = 52.4 \text{ lbf}$$

$$T_1 = F_1 + F_{b1} = 64.4 + 77.8 = 142.2 \text{ lbf}$$

$$T_2 = F_1 + F_{b2} = 64.4 + 52.4 = 116.8 \text{ lbf}$$

From Table 17-17, $K = 1193$ and $b = 10.926$.

$$\text{Eq. (17-27):} \quad N_P = \left[\left(\frac{1193}{142.2} \right)^{-10.926} + \left(\frac{1193}{116.8} \right)^{-10.926} \right]^{-1} = 11(10^9) \text{ passes}$$

Answer Since N_P is out of the validity range of Eq. (17-27), life is reported as greater than 10^9 passes. Then

$$\text{Answer Eq. (17-28):} \quad t > \frac{10^9(113.8)}{720(3390)} = 46\,600 \text{ h}$$

17-4 Timing Belts

A timing belt is made of a rubberized fabric coated with a nylon fabric, and has steel wire within to take the tension load. It has teeth that fit into grooves cut on the periphery of the pulleys (Fig. 17-15). A timing belt does not stretch appreciably or slip and consequently transmits power at a constant angular-velocity ratio. No initial tension is needed.

Figure 17-15

Timing-belt drive showing portions of the pulley and belt. Note that the pitch diameter of the pulley is greater than the diametral distance across the top lands of the teeth.

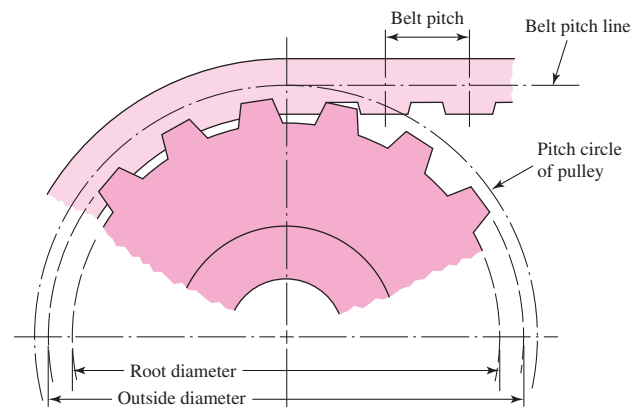


Table 17-18Standard Pitches
of Timing Belts

Service	Designation	Pitch p , in
Extra light	XL	$\frac{1}{5}$
Light	L	$\frac{3}{8}$
Heavy	H	$\frac{1}{2}$
Extra heavy	XH	$\frac{7}{8}$
Double extra heavy	XXH	$1\frac{1}{4}$

Such belts can operate over a very wide range of speeds, have efficiencies in the range of 97 to 99 percent, require no lubrication, and are quieter than chain drives. There is no chordal-speed variation, as in chain drives (see Sec. 17-5), and so they are an attractive solution for precision-drive requirements.

The steel wire, the tension member of a timing belt, is located at the belt pitch line (Fig. 17-15). Thus the pitch length is the same regardless of the thickness of the backing.

The five standard inch-series pitches available are listed in Table 17-18 with their letter designations. Standard pitch lengths are available in sizes from 6 to 180 in. Pulleys come in sizes from 0.60 in pitch diameter up to 35.8 in and with groove numbers from 10 to 120.

The design and selection process for timing belts is so similar to that for V belts that the process will not be presented here. As in the case of other belt drives, the manufacturers will provide an ample supply of information and details on sizes and strengths.

17-5 Roller Chain

Basic features of chain drives include a constant ratio, since no slippage or creep is involved; long life; and the ability to drive a number of shafts from a single source of power.

Roller chains have been standardized as to sizes by the ANSI. Figure 17-16 shows the nomenclature. The pitch is the linear distance between the centers of the rollers. The width is the space between the inner link plates. These chains are manufactured in single, double, triple, and quadruple strands. The dimensions of standard sizes are listed in Table 17-19.

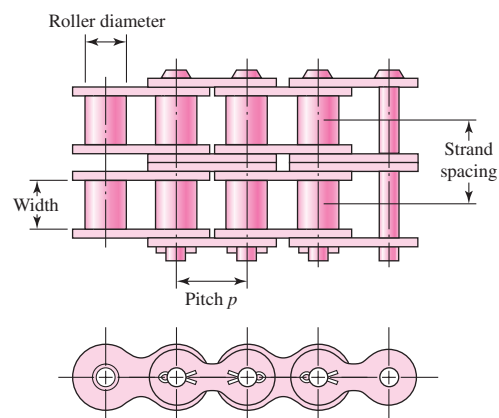
Figure 17-16Portion of a double-strand
roller chain.

Table 17-19

Dimensions of American
Standard Roller
Chains—Single Strand

Source: Compiled from ANSI
B29.1-1975.

ANSI Chain Number	Pitch, in (mm)	Width, in (mm)	Minimum Tensile Strength, lbf (N)	Average Weight, lbf/ft (N/m)	Roller Diameter, in (mm)	Multiple- Strand Spacing, in (mm)
25	0.250 (6.35)	0.125 (3.18)	780 (3 470)	0.09 (1.31)	0.130 (3.30)	0.252 (6.40)
35	0.375 (9.52)	0.188 (4.76)	1 760 (7 830)	0.21 (3.06)	0.200 (5.08)	0.399 (10.13)
41	0.500 (12.70)	0.25 (6.35)	1 500 (6 670)	0.25 (3.65)	0.306 (7.77)	— —
40	0.500 (12.70)	0.312 (7.94)	3 130 (13 920)	0.42 (6.13)	0.312 (7.92)	0.566 (14.38)
50	0.625 (15.88)	0.375 (9.52)	4 880 (21 700)	0.69 (10.1)	0.400 (10.16)	0.713 (18.11)
60	0.750 (19.05)	0.500 (12.7)	7 030 (31 300)	1.00 (14.6)	0.469 (11.91)	0.897 (22.78)
80	1.000 (25.40)	0.625 (15.88)	12 500 (55 600)	1.71 (25.0)	0.625 (15.87)	1.153 (29.29)
100	1.250 (31.75)	0.750 (19.05)	19 500 (86 700)	2.58 (37.7)	0.750 (19.05)	1.409 (35.76)
120	1.500 (38.10)	1.000 (25.40)	28 000 (124 500)	3.87 (56.5)	0.875 (22.22)	1.789 (45.44)
140	1.750 (44.45)	1.000 (25.40)	38 000 (169 000)	4.95 (72.2)	1.000 (25.40)	1.924 (48.87)
160	2.000 (50.80)	1.250 (31.75)	50 000 (222 000)	6.61 (96.5)	1.125 (28.57)	2.305 (58.55)
180	2.250 (57.15)	1.406 (35.71)	63 000 (280 000)	9.06 (132.2)	1.406 (35.71)	2.592 (65.84)
200	2.500 (63.50)	1.500 (38.10)	78 000 (347 000)	10.96 (159.9)	1.562 (39.67)	2.817 (71.55)
240	3.00 (76.70)	1.875 (47.63)	112 000 (498 000)	16.4 (239)	1.875 (47.62)	3.458 (87.83)

Figure 17-17 shows a sprocket driving a chain and rotating in a counterclockwise direction. Denoting the chain pitch by p , the pitch angle by γ , and the pitch diameter of the sprocket by D , from the trigonometry of the figure we see

$$\sin \frac{\gamma}{2} = \frac{p/2}{D/2} \quad \text{or} \quad D = \frac{p}{\sin(\gamma/2)} \quad (a)$$

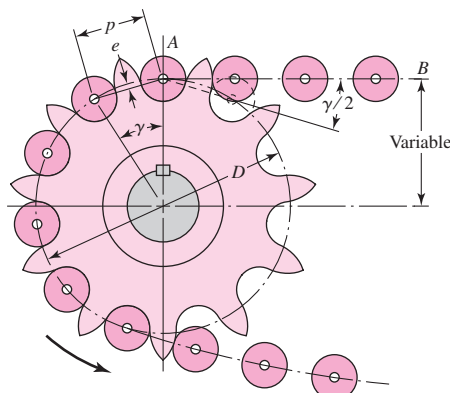
Since $\gamma = 360^\circ/N$, where N is the number of sprocket teeth, Eq. (a) can be written

$$D = \frac{p}{\sin(180^\circ/N)} \quad (17-29)$$

The angle $\gamma/2$, through which the link swings as it enters contact, is called the *angle of articulation*. It can be seen that the magnitude of this angle is a function of the number of teeth. Rotation of the link through this angle causes impact between the

Figure 17-17

Engagement of a chain and sprocket.



rollers and the sprocket teeth and also wear in the chain joint. Since the life of a properly selected drive is a function of the wear and the surface fatigue strength of the rollers, it is important to reduce the angle of articulation as much as possible.

The number of sprocket teeth also affects the velocity ratio during the rotation through the pitch angle γ . At the position shown in Fig. 17-17, the chain AB is tangent to the pitch circle of the sprocket. However, when the sprocket has turned an angle of $\gamma/2$, the chain line AB moves closer to the center of rotation of the sprocket. This means that the chain line AB is moving up and down, and that the lever arm varies with rotation through the pitch angle, all resulting in an uneven chain exit velocity. You can think of the sprocket as a polygon in which the exit velocity of the chain depends upon whether the exit is from a corner, or from a flat of the polygon. Of course, the same effect occurs when the chain first enters into engagement with the sprocket.

The chain velocity V is defined as the number of feet coming off the sprocket per unit time. Thus the chain velocity in feet per minute is

$$V = \frac{Npn}{12} \quad (17-30)$$

where N = number of sprocket teeth

p = chain pitch, in

n = sprocket speed, rev/min

The maximum exit velocity of the chain is

$$v_{\max} = \frac{\pi Dn}{12} = \frac{\pi np}{12 \sin(\gamma/2)} \quad (b)$$

where Eq. (a) has been substituted for the pitch diameter D . The minimum exit velocity occurs at a diameter d , smaller than D . Using the geometry of Fig. 17-17, we find

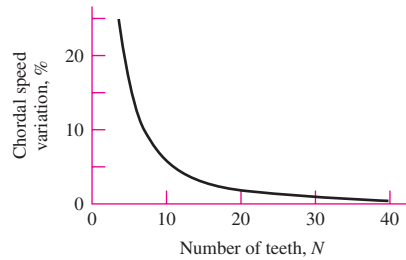
$$d = D \cos \frac{\gamma}{2} \quad (c)$$

Thus the minimum exit velocity is

$$v_{\min} = \frac{\pi dn}{12} = \frac{\pi np \cos(\gamma/2)}{12 \sin(\gamma/2)} \quad (d)$$

Now substituting $\gamma/2 = 180^\circ/N$ and employing Eqs. (17-30), (b), and (d), we find the

| Figure 17-18



speed variation to be

$$\frac{\Delta V}{V} = \frac{v_{\max} - v_{\min}}{V} = \frac{\pi}{N} \left[\frac{1}{\sin(180^\circ/N)} - \frac{1}{\tan(180^\circ/N)} \right] \quad (17-31)$$

This is called the *chordal speed variation* and is plotted in Fig. 17–18. When chain drives are used to synchronize precision components or processes, due consideration must be given to these variations. For example, if a chain drive synchronized the cutting of photographic film with the forward drive of the film, the lengths of the cut sheets of film might vary too much because of this chordal speed variation. Such variations can also cause vibrations within the system.

Although a large number of teeth is considered desirable for the driving sprocket, in the usual case it is advantageous to obtain as small a sprocket as possible, and this requires one with a small number of teeth. For smooth operation at moderate and high speeds it is considered good practice to use a driving sprocket with at least 17 teeth; 19 or 21 will, of course, give a better life expectancy with less chain noise. Where space limitations are severe or for very slow speeds, smaller tooth numbers may be used by sacrificing the life expectancy of the chain.

Driven sprockets are not made in standard sizes over 120 teeth, because the pitch elongation will eventually cause the chain to “ride” high long before the chain is worn out. The most successful drives have velocity ratios up to 6:1, but higher ratios may be used at the sacrifice of chain life.

Roller chains seldom fail because they lack tensile strength; they more often fail because they have been subjected to a great many hours of service. Actual failure may be due either to wear of the rollers on the pins or to fatigue of the surfaces of the rollers. Roller-chain manufacturers have compiled tables that give the horsepower capacity corresponding to a life expectancy of 15 kh for various sprocket speeds. These capacities are tabulated in Table 17–20 for 17-tooth sprockets. Table 17–21 displays available tooth counts on sprockets of one supplier. Table 17–22 lists the tooth correction factors for other than 17 teeth. Table 17–23 shows the multiple-strand factors K_2 .

The capacities of chains are based on the following:

- 15 000 h at full load
- Single strand
- ANSI proportions
- Service factor of unity
- 100 pitches in length
- Recommended lubrication
- Elongation maximum of 3 percent

- Horizontal shafts
- Two 17-tooth sprockets

The fatigue strength of link plates governs capacity at lower speeds. The American Chain Association (ACA) publication *Chains for Power Transmission and Materials Handling* (1982) gives, for single-strand chain, the nominal power H_1 , link-plate limited, as

$$H_1 = 0.004N_1^{1.08}n_1^{0.9}p^{(3-0.07p)} \quad \text{hp} \quad (17-32)$$

and the nominal power H_2 , roller-limited, as

$$H_2 = \frac{1000K_r N_1^{1.5} p^{0.8}}{n_1^{1.5}} \quad \text{hp} \quad (17-33)$$

where N_1 = number of teeth in the smaller sprocket

n_1 = sprocket speed, rev/min

p = pitch of the chain, in

K_r = 29 for chain numbers 25, 35; 3.4 for chain 41; and 17 for chains 40–240

Table 17-20

Rated Horsepower
Capacity of Single-
Strand Single-Pitch Roller
Chain for a
17-Tooth Sprocket

Source: Compiled from ANSI
B29.1-1975 information
only section, and from
B29.9-1958.

Sprocket Speed, rev/min	ANSI Chain Number					
	25	35	40	41	50	60
50	0.05	0.16	0.37	0.20	0.72	1.24
100	0.09	0.29	0.69	0.38	1.34	2.31
150	0.13*	0.41*	0.99*	0.55*	1.92*	3.32
200	0.16*	0.54*	1.29	0.71	2.50	4.30
300	0.23	0.78	1.85	1.02	3.61	6.20
400	0.30*	1.01*	2.40	1.32	4.67	8.03
500	0.37	1.24	2.93	1.61	5.71	9.81
600	0.44*	1.46*	3.45*	1.90*	6.72*	11.6
700	0.50	1.68	3.97	2.18	7.73	13.3
800	0.56*	1.89*	4.48*	2.46*	8.71*	15.0
900	0.62	2.10	4.98	2.74	9.69	16.7
1000	0.68*	2.31*	5.48	3.01	10.7	18.3
1200	0.81	2.73	6.45	3.29	12.6	21.6
1400	0.93*	3.13*	7.41	2.61	14.4	18.1
1600	1.05*	3.53*	8.36	2.14	12.8	14.8
1800	1.16	3.93	8.96	1.79	10.7	12.4
2000	1.27*	4.32*	7.72*	1.52*	9.23*	10.6
2500	1.56	5.28	5.51*	1.10*	6.58*	7.57
3000	1.84	5.64	4.17	0.83	4.98	5.76
Type A			Type B		Type C	

*Estimated from ANSI tables by linear interpolation.

Note: Type A—manual or drip lubrication; type B—bath or disk lubrication; type C—oil-stream lubrication.

(Continued)

Table 17-20

Rated Horsepower
Capacity of Single-
Strand Single-Pitch Roller
Chain for a
17-Tooth Sprocket
(Continued)

Sprocket Speed, rev/min		ANSI Chain Number							
		80	100	120	140	160	180	200	240
50	Type A	2.88	5.52	9.33	14.4	20.9	28.9	38.4	61.8
100		5.38	10.3	17.4	26.9	39.1	54.0	71.6	115
150		7.75	14.8	25.1	38.8	56.3	77.7	103	166
200		10.0	19.2	32.5	50.3	72.9	101	134	215
300		14.5	27.7	46.8	72.4	105	145	193	310
400		18.7	35.9	60.6	93.8	136	188	249	359
500	Type B	22.9	43.9	74.1	115	166	204	222	0
600		27.0	51.7	87.3	127	141	155	169	
700		31.0	59.4	89.0	101	112	123	0	
800		35.0	63.0	72.8	82.4	91.7	101		
900		39.9	52.8	61.0	69.1	76.8	84.4		
1000		37.7	45.0	52.1	59.0	65.6	72.1		
1200		28.7	34.3	39.6	44.9	49.9	0		
1400		22.7	27.2	31.5	35.6	0			
1600		18.6	22.3	25.8	0				
1800		15.6	18.7	21.6					
2000		13.3	15.9	0					
2500		9.56	0.40						
3000		7.25	0						

Type C

Type C'

Note: Type A—manual or drip lubrication; type B—bath or disk lubrication; type C—oil-stream lubrication; type C'—type C, but this is a galling region; submit design to manufacturer for evaluation.

Table 17-21

Single-Strand Sprocket Tooth Counts Available from One Supplier*

No.	Available Sprocket Tooth Counts
25	8-30, 32, 34, 35, 36, 40, 42, 45, 48, 54, 60, 64, 65, 70, 72, 76, 80, 84, 90, 95, 96, 102, 112, 120
35	4-45, 48, 52, 54, 60, 64, 65, 68, 70, 72, 76, 80, 84, 90, 95, 96, 102, 112, 120
41	6-60, 64, 65, 68, 70, 72, 76, 80, 84, 90, 95, 96, 102, 112, 120
40	8-60, 64, 65, 68, 70, 72, 76, 80, 84, 90, 95, 96, 102, 112, 120
50	8-60, 64, 65, 68, 70, 72, 76, 80, 84, 90, 95, 96, 102, 112, 120
60	8-60, 62, 63, 64, 65, 66, 67, 68, 70, 72, 76, 80, 84, 90, 95, 96, 102, 112, 120
80	8-60, 64, 65, 68, 70, 72, 76, 78, 80, 84, 90, 95, 96, 102, 112, 120
100	8-60, 64, 65, 67, 68, 70, 72, 74, 76, 80, 84, 90, 95, 96, 102, 112, 120
120	9-45, 46, 48, 50, 52, 54, 55, 57, 60, 64, 65, 67, 68, 70, 72, 76, 80, 84, 90, 96, 102, 112, 120
140	9-28, 30, 31, 32, 33, 34, 35, 36, 37, 39, 40, 42, 43, 45, 48, 54, 60, 64, 65, 68, 70, 72, 76, 80, 84, 96
160	8-30, 32–36, 38, 40, 45, 46, 50, 52, 53, 54, 56, 57, 60, 62, 63, 64, 65, 66, 68, 70, 72, 73, 80, 84, 96
180	13-25, 28, 35, 39, 40, 45, 54, 60
200	9-30, 32, 33, 35, 36, 39, 40, 42, 44, 45, 48, 50, 51, 54, 56, 58, 59, 60, 63, 64, 65, 68, 70, 72
240	9-30, 32, 35, 36, 40, 44, 45, 48, 52, 54, 60

*Morse Chain Company, Ithaca, NY, Type B hub sprockets.

Table 17-22Tooth Correction
Factors, K_1

Number of Teeth on Driving Sprocket	K_1 Pre-extreme Horsepower	K_1 Post-extreme Horsepower
11	0.62	0.52
12	0.69	0.59
13	0.75	0.67
14	0.81	0.75
15	0.87	0.83
16	0.94	0.91
17	1.00	1.00
18	1.06	1.09
19	1.13	1.18
20	1.19	1.28
N	$(N_1/17)^{1.08}$	$(N_1/17)^{1.5}$

Table 17-23Multiple-Strand
Factors K_2

Number of Strands	K_2
1	1.0
2	1.7
3	2.5
4	3.3
5	3.9
6	4.6
8	6.0

The constant 0.004 becomes 0.0022 for no. 41 lightweight chain. The nominal horsepower in Table 17-20 is $H_{\text{nom}} = \min(H_1, H_2)$. For example, for $N_1 = 17$, $n_1 = 1000$ rev/min, no. 40 chain with $p = 0.5$ in, from Eq. (17-32),

$$H_1 = 0.004(17)^{1.08} 1000^{0.9} 0.5^{[3-0.07(0.5)]} = 5.48 \text{ hp}$$

From Eq. (17-33),

$$H_2 = \frac{1000(17)17^{1.5}(0.5^{0.8})}{1000^{1.5}} = 21.64 \text{ hp}$$

The tabulated value in Table 17-20 is $H_{\text{tab}} = \min(5.48, 21.64) = 5.48$ hp.

It is preferable to have an odd number of teeth on the driving sprocket (17, 19, . . .) and an even number of pitches in the chain to avoid a special link. The approximate length of the chain L in pitches is

$$\frac{L}{p} \doteq \frac{2C}{p} + \frac{N_1 + N_2}{2} + \frac{(N_2 - N_1)^2}{4\pi^2 C/p} \quad (17-34)$$

The center-to-center distance C is given by

$$C = \frac{p}{4} \left[-A + \sqrt{A^2 - 8 \left(\frac{N_2 - N_1}{2\pi} \right)^2} \right] \quad (17-35)$$

where

$$A = \frac{N_1 + N_2}{2} - \frac{L}{p} \quad (17-36)$$

The allowable power H_a is given by

$$H_a = K_1 K_2 H_{\text{tab}} \quad (17-37)$$

where K_1 = correction factor for tooth number other than 17 (Table 17-22)

K_2 = strand correction (Table 17-23)

The horsepower that must be transmitted H_d is given by

$$H_d = H_{\text{nom}} K_s n_d \quad (17-38)$$

Equation (17-32) is the basis of the pre-extreme power entries (vertical entries) of Table 17-20, and the chain power is limited by link-plate fatigue. Equation (17-33) is the basis for the post-extreme power entries of these tables, and the chain power performance is limited by impact fatigue. The entries are for chains of 100 pitch length and 17-tooth sprocket. For a deviation from this

$$H_2 = 1000 \left[K_r \left(\frac{N_1}{n_1} \right)^{1.5} p^{0.8} \left(\frac{L_p}{100} \right)^{0.4} \left(\frac{15\,000}{h} \right)^{0.4} \right] \quad (17-39)$$

where L_p is the chain length in pitches and h is the chain life in hours. Viewed from a deviation viewpoint, Eq. (17-39) can be written as a trade-off equation in the following form:

$$\frac{H_2^{2.5} h}{N_1^{3.75} L_p} = \text{constant} \quad (17-40)$$

If tooth-correction factor K_1 is used, then omit the term $N_1^{3.75}$. Note that $(N_1^{1.5})^{2.5} = N_1^{3.75}$.

In Eq. (17-40) one would expect the h/L_p term because doubling the hours can require doubling the chain length, other conditions constant, for the same number of cycles. Our experience with contact stresses leads us to expect a load (tension) life relation of the form $F^a L = \text{constant}$. In the more complex circumstance of roller-bushing impact, the Diamond Chain Company has identified $a = 2.5$.

The maximum speed (rev/min) for a chain drive is limited by galling between the pin and the bushing. Tests suggest

$$n_1 \leq 1000 \left[\frac{82.5}{7.95^p (1.0278)^{N_1} (1.323)^{F/1000}} \right]^{1/(1.59 \log p + 1.873)} \quad \text{rev/min}$$

where F is the chain tension in pounds.

EXAMPLE 17-5

Select drive components for a 2:1 reduction, 90-hp input at 300 rev/min, moderate shock, an abnormally long 18-hour day, poor lubrication, cold temperatures, dirty surroundings, short drive $C/p = 25$.

Solution

Function: $H_{\text{nom}} = 90$ hp, $n_1 = 300$ rev/min, $C/p = 25$, $K_s = 1.3$

Design factor: $n_d = 1.5$

Sprocket teeth: $N_1 = 17$ teeth, $N_2 = 34$ teeth, $K_1 = 1$, $K_2 = 1, 1.7, 2.5, 3.3$

Chain number of strands:

$$H_{\text{tab}} = \frac{n_d K_s H_{\text{nom}}}{K_1 K_2} = \frac{1.5(1.3)90}{(1)K_2} = \frac{176}{K_2}$$

Form a table:

Number of Strands	176/ K_2 (Table 17-23)	Chain Number (Table 17-19)	Lubrication Type
1	$176/1 = 176$	200	C'
2	$176/1.7 = 104$	160	C
3	$176/2.5 = 70.4$	140	B
4	$176/3.3 = 53.3$	140	B

Decision 3 strands of number 140 chain (H_{tab} is 72.4 hp).

Number of pitches in the chain:

$$\begin{aligned} \frac{L}{p} &= \frac{2C}{p} + \frac{N_1 + N_2}{2} + \frac{(N_2 - N_1)^2}{4\pi^2 C/p} \\ &= 2(25) + \frac{17 + 34}{2} + \frac{(34 - 17)^2}{4\pi^2(25)} = 75.79 \text{ pitches} \end{aligned}$$

Decision Use 76 pitches. Then $L/p = 76$.

Identify the center-to-center distance: From Eqs. (17-35) and (17-36),

$$\begin{aligned} A &= \frac{N_1 + N_2}{2} - \frac{L}{p} = \frac{17 + 34}{2} - 76 = -50.5 \\ C &= \frac{p}{4} \left[-A + \sqrt{A^2 - 8 \left(\frac{N_2 - N_1}{2\pi} \right)^2} \right] \\ &= \frac{p}{4} \left[50.5 + \sqrt{50.5^2 - 8 \left(\frac{34 - 17}{2\pi} \right)^2} \right] = 25.104p \end{aligned}$$

For a 140 chain, $p = 1.75$ in. Thus,

$$C = 25.104p = 25.104(1.75) = 43.93 \text{ in}$$

Lubrication: Type B

Comment: This is operating on the pre-extreme portion of the power, so durability estimates other than 15 000 h are not available. Given the poor operating conditions, life will be much shorter.

Lubrication of roller chains is essential in order to obtain a long and trouble-free life. Either a drip feed or a shallow bath in the lubricant is satisfactory. A medium or light mineral oil, without additives, should be used. Except for unusual conditions, heavy oils and greases are not recommended, because they are too viscous to enter the small clearances in the chain parts.

17-6 Wire Rope

Wire rope is made with two types of winding, as shown in Fig. 17-19. The *regular lay*, which is the accepted standard, has the wire twisted in one direction to form the strands, and the strands twisted in the opposite direction to form the rope. In the completed rope the visible wires are approximately parallel to the axis of the rope. Regular-lay ropes do not kink or untwist and are easy to handle.

Lang-lay ropes have the wires in the strand and the strands in the rope twisted in the same direction, and hence the outer wires run diagonally across the axis of the rope. Lang-lay ropes are more resistant to abrasive wear and failure due to fatigue than are regular-lay ropes, but they are more likely to kink and untwist.

Standard ropes are made with a hemp core, which supports and lubricates the strands. When the rope is subjected to heat, either a steel center or a wire-strand center must be used.

Wire rope is designated as, for example, a $1\frac{1}{8}$ -in 6×7 haulage rope. The first figure is the diameter of the rope (Fig. 17-19c). The second and third figures are the number of strands and the number of wires in each strand, respectively. Table 17-24 lists some of the various ropes that are available, together with their characteristics and properties. The area of the metal in standard hoisting and haulage rope is $A_m = 0.38d^2$.

When a wire rope passes around a sheave, there is a certain amount of readjustment of the elements. Each of the wires and strands must slide on several others, and presumably some individual bending takes place. It is probable that in this complex action there exists some stress concentration. The stress in one of the wires of a rope passing around a sheave may be calculated as follows. From solid mechanics, we have

$$M = \frac{EI}{\rho} \quad \text{and} \quad M = \frac{\sigma I}{c} \quad (a)$$

where the quantities have their usual meaning. Eliminating M and solving for the stress gives

$$\sigma = \frac{Ec}{\rho} \quad (b)$$

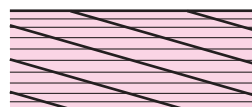
For the radius of curvature ρ , we can substitute the sheave radius $D/2$. Also, $c = d_w/2$, where d_w is the wire diameter. These substitutions give

$$\sigma = E_r \frac{d_w}{D} \quad (c)$$

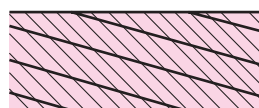
where E_r is the *modulus of elasticity of the rope*, not the wire. To understand this equation, observe that the individual wire makes a corkscrew figure in space and if you pull on it to determine E it will stretch or give more than its native E would suggest. Therefore

Figure 17-19

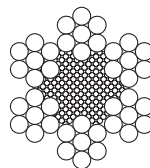
Types of wire rope; both lays are available in either right or left hand.



(a) Regular lay



(b) Lang lay



(c) Section of
 6×7 rope

Table 17-24Wire-Rope Data *Source: Compiled from American Steel and Wire Company Handbook.*

Rope	Weight per Foot, lbf	Minimum Sheave Diameter, in	Standard Sizes d , in	Material	Size of Outer Wires	Modulus of Elasticity,* Mpsi	Strength,† kpsi
6 × 7 haulage	$1.50d^2$	$42d$	$\frac{1}{4}$ – $1\frac{1}{2}$	Monitor steel	$d/9$	14	100
				Plow steel	$d/9$	14	88
				Mild plow steel	$d/9$	14	76
6 × 19 standard hoisting	$1.60d^2$	$26d$ – $34d$	$\frac{1}{4}$ – $2\frac{3}{4}$	Monitor steel	$d/13$ – $d/16$	12	106
				Plow steel	$d/13$ – $d/16$	12	93
				Mild plow steel	$d/13$ – $d/16$	12	80
6 × 37 special flexible	$1.55d^2$	$18d$	$\frac{1}{4}$ – $3\frac{1}{2}$	Monitor steel	$d/22$	11	100
				Plow steel	$d/22$	11	88
8 × 19 extra flexible	$1.45d^2$	$21d$ – $26d$	$\frac{1}{4}$ – $1\frac{1}{2}$	Monitor steel	$d/15$ – $d/19$	10	92
				Plow steel	$d/15$ – $d/19$	10	80
7 × 7 aircraft	$1.70d^2$	—	$\frac{1}{16}$ – $\frac{3}{8}$	Corrosion-resistant steel	—	—	124
				Carbon steel	—	—	124
7 × 9 aircraft	$1.75d^2$	—	$\frac{1}{8}$ – $1\frac{3}{8}$	Corrosion-resistant steel	—	—	135
				Carbon steel	—	—	143
19-wire aircraft	$2.15d^2$	—	$\frac{1}{32}$ – $\frac{5}{16}$	Corrosion-resistant steel	—	—	165
				Carbon steel	—	—	165

*The modulus of elasticity is only approximate; it is affected by the loads on the rope and, in general, increases with the life of the rope.

†The strength is based on the nominal area of the rope. The figures given are only approximate and are based on 1-in rope sizes and $\frac{1}{4}$ -in aircraft-cable sizes.

E is still the modulus of elasticity of the *wire*, but in its peculiar configuration as part of the rope, its modulus is smaller. For this reason we say that E_r in Eq. (c) is the modulus of elasticity of the rope, not the wire, recognizing that one can quibble over the name used.

Equation (c) gives the tensile stress σ in the outer wires. The sheave diameter is represented by D . This equation reveals the importance of using a large-diameter sheave. The suggested minimum sheave diameters in Table 17-24 are based on a D/d_w ratio of 400. If possible, the sheaves should be designed for a larger ratio. For elevators and mine hoists, D/d_w is usually taken from 800 to 1000. If the ratio is less than 200, heavy loads will often cause a permanent set in the rope.

A wire rope tension giving the same tensile stress as the sheave bending is called the *equivalent bending load* F_b , given by

$$F_b = \sigma A_m = \frac{E_r d_w A_m}{D} \quad (17-41)$$

A wire rope may fail because the static load exceeds the ultimate strength of the rope. Failure of this nature is generally not the fault of the designer, but rather that of the operator in permitting the rope to be subjected to loads for which it was not designed.

The first consideration in selecting a wire rope is to determine the static load. This load is composed of the following items:

- The known or dead weight
- Additional loads caused by sudden stops or starts
- Shock loads
- Sheave-bearing friction

When these loads are summed, the total can be compared with the ultimate strength of the rope to find a factor of safety. However, the ultimate strength used in this determination must be reduced by the strength loss that occurs when the rope passes over a curved surface such as a stationary sheave or a pin; see Fig. 17–20.

For an average operation, use a factor of safety of 5. Factors of safety up to 8 or 9 are used if there is danger to human life and for very critical situations. Table 17–25

Figure 17–20

Percent strength loss due to different D/d ratios; derived from standard test data for 6×19 and 6×17 class ropes. (Materials provided by the Wire Rope Technical Board (WRTB), Wire Rope Users Manual Third Edition, Second printing. Reprinted by permission.)

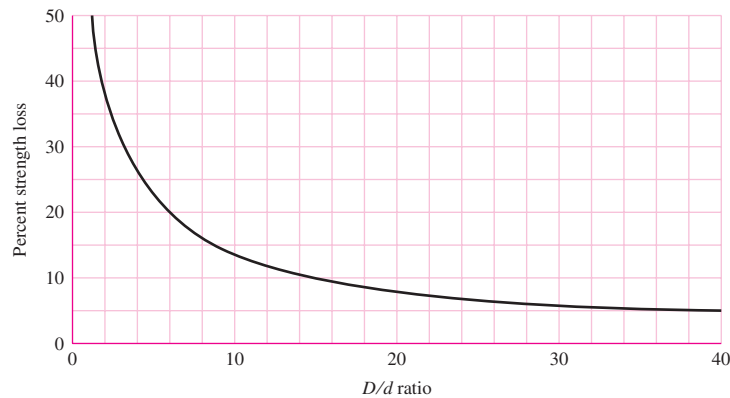


Table 17–25

Minimum Factors of
Safety for Wire Rope*

Source: Compiled from a variety of sources, including ANSI A17.1-1978.

Track cables	3.2	Passenger elevators, ft/min:	
Guys	3.5	50	7.60
Mine shafts, ft:		300	9.20
Up to 500	8.0	800	11.25
1000–2000	7.0	1200	11.80
2000–3000	6.0	1500	11.90
Over 3000	5.0	Freight elevators, ft/min:	
Hoisting	5.0	50	6.65
Haulage	6.0	300	8.20
Cranes and derricks	6.0	800	10.00
Electric hoists	7.0	1200	10.50
Hand elevators	5.0	1500	10.55
Private elevators	7.5	Powered dumbwaiters, ft/min:	
Hand dumbwaiter	4.5	50	4.8
Grain elevators	7.5	300	6.6
		500	8.0

*Use of these factors does not preclude a fatigue failure.

lists minimum factors of safety for a variety of design situations. Here, the factor of safety is defined as

$$n = \frac{F_u}{F_t}$$

where F_u is the ultimate wire load and F_t is the largest working tension.

Once you have made a tentative selection of a rope based upon static strength, the next consideration is to ensure that the wear life of the rope and the sheave or sheaves meets certain requirements. When a loaded rope is bent over a sheave, the rope stretches like a spring, rubs against the sheave, and causes wear of both the rope and the sheave. The amount of wear that occurs depends upon the pressure of the rope in the sheave groove. This pressure is called the *bearing pressure*; a good estimate of its magnitude is given by

$$p = \frac{2F}{dD} \quad (17-42)$$

where F = tensile force on rope

d = rope diameter

D = sheave diameter

The allowable pressures given in Table 17–26 are to be used only as a rough guide; they may not prevent a fatigue failure or severe wear. They are presented here because they represent past practice and furnish a starting point in design.

A fatigue diagram not unlike an S - N diagram can be obtained for wire rope. Such a diagram is shown in Fig. 17–21. Here the ordinate is the pressure-strength ratio p/S_u , and S_u is the ultimate tensile strength of the *wire*. The abscissa is the number of bends that occur in the total life of the rope. The curve implies that a wire rope has a fatigue limit; but this is not true at all. A wire rope that is used over sheaves will eventually fail

Table 17-26

Maximum Allowable
Bearing Pressures of
Ropes on Sheaves
(in psi)

Source: Wire Rope Users
Manual, AISI, 1979.

Rope	Sheave Material				
	Wood ^a	Cast Iron ^b	Cast Steel ^c	Chilled Cast Irons ^d	Manganese Steel ^e
Regular lay:					
6 × 7	150	300	550	650	1470
6 × 19	250	480	900	1100	2400
6 × 37	300	585	1075	1325	3000
8 × 19	350	680	1260	1550	3500
Lang lay:					
6 × 7	165	350	600	715	1650
6 × 19	275	550	1000	1210	2750
6 × 37	330	660	1180	1450	3300

^aOn end grain of beech, hickory, or gum.

^bFor H_B (min.) = 125.

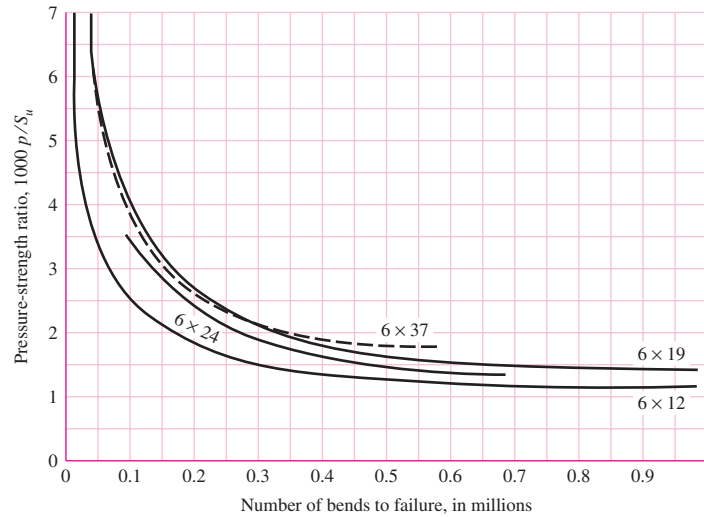
^c30–40 carbon; H_B (min.) = 160.

^dUse only with uniform surface hardness.

^eFor high speeds with balanced sheaves having ground surfaces.

Figure 17-21

Experimentally determined relation between the fatigue life of wire rope and the sheave pressure.



in fatigue or in wear. However, the graph does show that the rope will have a long life if the ratio p/S_u is less than 0.001. Substitution of this ratio in Eq. (17-42) gives

$$S_u = \frac{2000F}{dD} \quad (17-43)$$

where S_u is the ultimate strength of the *wire*, not the rope, and the units of S_u are related to the units of F . This interesting equation contains the wire strength, the load, the rope diameter, and the sheave diameter—all four variables in a single equation! Dividing both sides of Eq. (17-42) by the ultimate strength of the wires S_u and solving for F gives

$$F_f = \frac{(p/S_u)S_u dD}{2} \quad (17-44)$$

where F_f is interpreted as the allowable fatigue tension as the wire is flexed a number of times corresponding to p/S_u selected from Fig. 17-21 for a particular rope and life expectancy. The factor of safety can be defined in fatigue as

$$n_f = \frac{F_f - F_b}{F_t} \quad (17-45)$$

where F_f is the rope tension strength under flexing and F_t is the tension at the place where the rope is flexing. Unfortunately, the designer often has vendor information that tabulates ultimate rope tension and gives no ultimate-strength S_u information concerning the wires from which the rope is made. Some guidance in strength of individual wires is

Improved plow steel (monitor)	$240 < S_u < 280$ kpsi
Plow steel	$210 < S_u < 240$ kpsi
Mild plow steel	$180 < S_u < 210$ kpsi

In wire-rope usage, the factor of safety has been defined in static loading as $n = F_u/F_t$ or $n = (F_u - F_b)/F_t$, where F_b is the rope tension that would induce the same outer-wire stress as that given by Eq. (c). The factor of safety in fatigue loading can be defined as in Eq. (17-45), or by using a static analysis and compensating with a large factor of safety applicable to static loading, as in Table 17-25. When using factors of safety expressed in codes, standards, corporate design manuals, or wire-rope manufacturers'

recommendations or from the literature, be sure to ascertain upon which basis the factor of safety is to be evaluated, and proceed accordingly.

If the rope is made of plow steel, the wires are probably hard-drawn AISI 1070 or 1080 carbon steel. Referring to Table 10–3, we see that this lies somewhere between hard-drawn spring wire and music wire. But the constants m and A needed to solve Eq. (10–14), p. 505, for S_u are lacking.

Practicing engineers who desire to solve Eq. (17–43) should determine the wire strength S_u for the rope under consideration by unraveling enough wire to test for the Brinell hardness. Then S_u can be found using Eq. (2–17), p. 37. Fatigue failure in wire rope is not sudden, as in solid bodies, but progressive, and shows as the breaking of an outside wire. This means that the beginning of fatigue can be detected by periodic routine inspection.

Figure 17–22 is another graph showing the gain in life to be obtained by using large D/d ratios. In view of the fact that the life of wire rope used over sheaves is only finite, it is extremely important that the designer specify and insist that periodic inspection, lubrication, and maintenance procedures be carried out during the life of the rope. Table 17–27 gives useful properties of some wire ropes.

For a mine-hoist problem we can develop working equations from the preceding presentation. The wire rope tension F_t due to load and acceleration/deceleration is

$$F_t = \left(\frac{W}{m} + wl \right) \left(1 + \frac{a}{g} \right) \quad (17-46)$$

Figure 17-22

Service-life curve based on bending and tensile stresses only. This curve shows that the life corresponding to $D/d = 48$ is twice that of $D/d = 33$. (*Materials provided by the Wire Rope Technical Board (WRTB), Wire Rope Users Manual Third Edition, Second printing. Reprinted by permission.*)

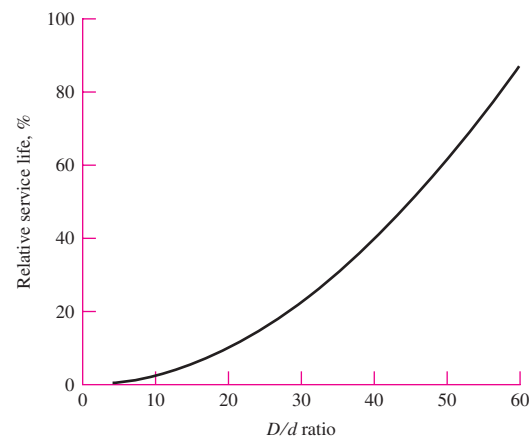


Table 17-27

Some Useful Properties of 6×7 , 6×19 , and 6×37 Wire Ropes

Wire Rope	Weight per Foot w , lbf/ft	Weight per Foot Including Core w , lbf/ft	Minimum Sheave Diameter D , in	Better Sheave Diameter D , in	Diameter of Wires d_w , in	Area of Metal A_m , in ²	Rope Young's Modulus E_r , psi
6×7	$1.50d^2$		$42d$	$72d$	$0.111d$	$0.38d^2$	13×10^6
6×19	$1.60d^2$	$1.76d^2$	$30d$	$45d$	$0.067d$	$0.40d^2$	12×10^6
6×37	$1.55d^2$	$1.71d^2$	$18d$	$27d$	$0.048d$	$0.40d^2$	12×10^6

where W = weight at the end of the rope (cage and load), lbf
 m = number of wire ropes supporting the load
 w = weight/foot of the wire rope, lbf/ft
 l = suspended length of rope, ft
 a = maximum acceleration/deceleration experienced, ft/s²
 g = acceleration of gravity, ft/s²

The fatigue tensile strength in pounds for a specified life F_f is

$$F_f = \frac{(p/S_u)S_u Dd}{2} \quad (17-47)$$

where (p/S_u) = specified life, from Fig. 17-21
 S_u = ultimate tensile strength of the wires, psi
 D = sheave or winch drum diameter, in
 d = nominal wire rope size, in

The equivalent bending load F_b is

$$F_b = \frac{E_r d_w A_m}{D} \quad (17-48)$$

where E_r = Young's modulus for the wire rope, Table 17-24 or 17-27, psi
 d_w = diameter of the wires, in
 A_m = metal cross-sectional area, Table 17-24 or 17-28, in²
 D = sheave or winch drum diameter, in

The static factor of safety n_s is

$$n_s = \frac{F_u - F_b}{F_t} \quad (17-49)$$

Be careful when comparing recommended static factors of safety to Eq. (17-49), as n_s is sometimes defined as F_u/F_t . The fatigue factor of safety n_f is

$$n_f = \frac{F_f - F_b}{F_t} \quad (17-50)$$

EXAMPLE 17-6

Given a 6×19 monitor steel ($S_u = 240$ kpsi) wire rope.

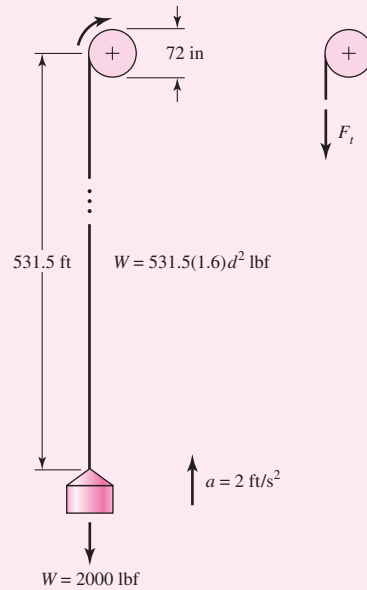
(a) Develop the expressions for rope tension F_t , fatigue tension F_f , equivalent bending tensions F_b , and fatigue factor of safety n_f for a 531.5-ft, 1-ton cage-and-load mine hoist with a starting acceleration of 2 ft/s² as depicted in Fig. 17-23. The sheave diameter is 72 in.

(b) Using the expressions developed in part (a), examine the variation in factor of safety n_f for various wire rope diameters d and number of supporting ropes m .

Solution (a) Rope tension F_t from Eq. (17-46) is given by

Answer

$$\begin{aligned}
 F_t &= \left(\frac{W}{m} + wl \right) \left(1 + \frac{a}{g} \right) = \left[\frac{2000}{m} + 1.60d^2(531.5) \right] \left(1 + \frac{2}{32.2} \right) \\
 &= \frac{2124}{m} + 903d^2 \text{ lbf}
 \end{aligned}$$

Figure 17-23Geometry of the mine hoist of
Ex. 17-6.

From Fig. 17-21, use $p/S_u = 0.0014$. Fatigue tension F_f from Eq. (17-47) is given by

Answer
$$F_f = \frac{(p/S_u)S_u D d}{2} = \frac{0.0014(240\,000)72d}{2} = 12\,096d \text{ lbf}$$

Equivalent bending tension F_b from Eq. (17-48) and Table 17-27 is given by

Answer
$$F_b = \frac{E_r d_w A_m}{D} = \frac{12(10^6)0.067d(0.40d^2)}{72} = 4467d^3 \text{ lbf}$$

Factor of safety n_f in fatigue from Eq. (17-50) is given by

Answer
$$n_f = \frac{F_f - F_b}{F_t} = \frac{12\,096d - 4467d^3}{2124/m + 903d^2}$$

(b) Form a table as follows:

d	n_f			
	$m = 1$	$m = 2$	$m = 3$	$m = 4$
0.25	1.355	2.641	3.865	5.029
0.375	1.910	3.617	5.150	6.536
0.500	2.336	4.263	5.879	7.254
0.625	2.612	4.573	6.099	7.331
0.750	2.731	4.578	5.911	6.918
0.875	2.696	4.330	5.425	6.210
1.000	2.520	3.882	4.736	5.320

Wire rope sizes are discrete, as is the number of supporting ropes. Note that for each m the factor of safety exhibits a maximum. Predictably the largest factor of safety increases with m . If the required factor of safety were to be 6, only three or four ropes could meet the requirement. The sizes are different: $\frac{5}{8}$ -in ropes with three ropes or $\frac{3}{8}$ -in ropes with four ropes. The costs include not only the wires, but the grooved winch drums.

17-7 Flexible Shafts

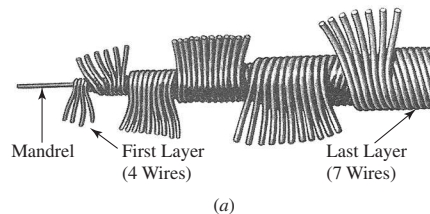
One of the greatest limitations of the solid shaft is that it cannot transmit motion or power around corners. It is therefore necessary to resort to belts, chains, or gears, together with bearings and the supporting framework associated with them. The flexible shaft may often be an economical solution to the problem of transmitting motion around corners. In addition to the elimination of costly parts, its use may reduce noise considerably.

There are two main types of flexible shafts: the power-drive shaft for the transmission of power in a single direction, and the remote-control or manual-control shaft for the transmission of motion in either direction.

The construction of a flexible shaft is shown in Fig. 17-24. The cable is made by winding several layers of wire around a central core. For the power-drive shaft, rotation should be in a direction such that the outer layer is wound up.

Figure 17-24

Flexible shaft: (a) construction details; (b) a variety of configurations. (Courtesy of S. S. White Technologies, Inc.)



have a different lay of the wires forming the cable, with more wires in each layer, so that the torsional deflection is approximately the same for either direction of rotation.

Flexible shafts are rated by specifying the torque corresponding to various radii of curvature of the casing. A 15-in radius of curvature, for example, will give from 2 to 5 times more torque capacity than a 7-in radius. When flexible shafts are used in a drive in which gears are also used, the gears should be placed so that the flexible shaft runs at as high a speed as possible. This permits the transmission of the maximum amount of horsepower.

PROBLEMS

- 17-1** A 6-in-wide polyamide F-1 flat belt is used to connect a 2-in-diameter pulley to drive a larger pulley with an angular velocity ratio of 0.5. The center-to-center distance is 9 ft. The angular speed of the small pulley is 1750 rev/min as it delivers 2 hp. The service is such that a service factor K_s of 1.25 is appropriate.
- Find F_c , F_i , F_{1a} , and F_2 .
 - Find H_a , n_{fs} , and belt length.
 - Find the dip.

- 17-2** Perspective and insight can be gained by doubling all geometric dimensions and observing the effect on problem parameters. Take the drive of Prob. 17-1, double the dimensions, and compare.

- 17-3** A flat-belt drive is to consist of two 4-ft-diameter cast-iron pulleys spaced 16 ft apart. Select a belt type to transmit 60 hp at a pulley speed of 380 rev/min. Use a service factor of 1.1 and a design factor of 1.0.

- 17-4** In solving problems and examining examples, you probably have noticed some recurring forms:

$$w = 12\gamma bt = (12\gamma t)b = a_1 b,$$

$$(F_1)_a = F_a b C_p C_v = (F_a C_p C_v)b = a_0 b$$

$$F_c = \frac{wV^2}{g} = \frac{a_1 b}{32.174} \left(\frac{V}{60}\right)^2 = a_2 b$$

$$(F_1)_a - F_2 = 2T/d = 33\,000 H_d/V = 33\,000 H_{\text{nom}} K_s n_d/V$$

$$F_2 = (F_1)_a - [(F_1)_a - F_2] = a_0 b - 2T/d$$

$$f\phi = \ln \frac{(F_1)_a - F_c}{F_2 - F_c} = \ln \frac{(a_0 - a_2)b}{(a_0 - a_2)b - 2T/d}$$

Show that

$$b = \frac{1}{a_0 - a_2} \frac{33\,000 H_d}{V} \frac{\exp(f\phi)}{\exp(f\phi) - 1}$$

- 17-5** Return to Ex. 17-1 and complete the following.
- Find the torque capacity that would put the drive as built at the point of slip, as well as the initial tension F_i .
 - Find the belt width b that exhibits $n_{fs} = n_d = 1.1$.
 - For part b find the corresponding F_{1a} , F_c , F_i , F_2 , power, and n_{fs} .
 - What have you learned?
- 17-6** Take the drive of Prob. 17-5 and double the belt width. Compare F_c , F_i , F_{1a} , F_2 , H_a , n_{fs} , and dip.

17-7 Belted pulleys place loads on shafts, inducing bending and loading bearings. Examine Fig. 17-7 and develop an expression for the load the belt places on the pulley, and then apply it to Ex. 17-2.

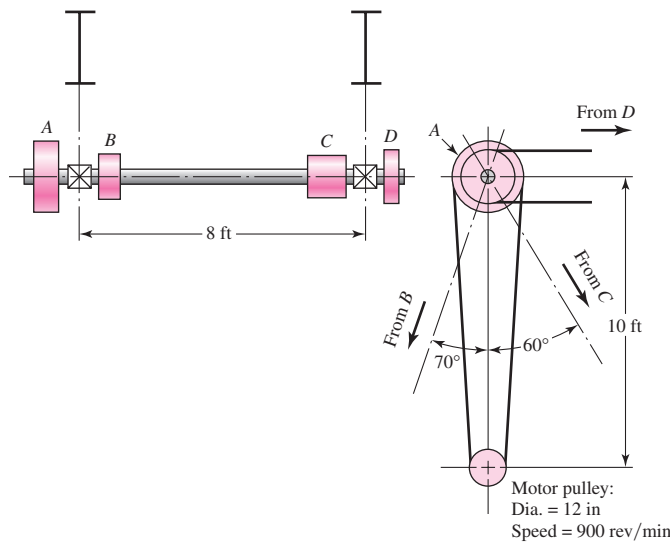
17-8 Example 17-2 resulted in selection of a 10-in-wide A-3 polyamide flat belt. Show that the value of F_1 restoring f to 0.80 is

$$F_1 = \frac{(\Delta F + F_c) \exp f\phi - F_c}{\exp f\phi - 1}$$

and compare the initial tensions.

17-9 The line shaft illustrated in the figure is used to transmit power from an electric motor by means of flat-belt drives to various machines. Pulley *A* is driven by a vertical belt from the motor pulley. A belt from pulley *B* drives a machine tool at an angle of 70° from the vertical and at a center-to-center distance of 9 ft. Another belt from pulley *C* drives a grinder at a center-to-center distance of 11 ft. Pulley *C* has a double width to permit belt shifting as shown in Fig. 17-4. The belt from pulley *D* drives a dust-extractor fan whose axis is located horizontally 8 ft from the axis of the lineshaft. Additional data are

Machine	Speed, rev/min	Power, hp	Lineshaft Pulley	Diameter, in
Machine tool	400	12.5	<i>B</i>	16
Grinder	300	4.5	<i>C</i>	14
Dust extractor	500	8.0	<i>D</i>	18



Problem 17-9

(Courtesy of Dr. Ahmed F. Abdel Azim, Zagazig University, Cairo.)

The power requirements, listed above, account for the overall efficiencies of the equipment. The two line-shaft bearings are mounted on hangers suspended from two overhead wide-flange beams. Select the belt types and sizes for each of the four drives. Make provision for replacing belts from time to time because of wear or permanent stretch.

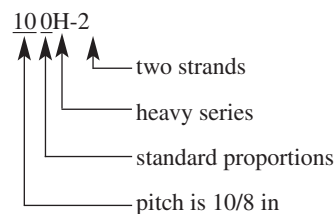
17-10 Two shafts 20 ft apart, with axes in the same horizontal plane, are to be connected with a flat belt in which the driving pulley, powered by a six-pole squirrel-cage induction motor with a 100 brake hp rating at 1140 rev/min, drives the second shaft at half its angular speed. The driven shaft drives light-shock machinery loads. Select a flat belt.

- 17-11** The mechanical efficiency of a flat-belt drive is approximately 98 percent. Because of its high value, the efficiency is often neglected. If a designer should choose to include it, where would he or she insert it in the flat-belt protocol?
- 17-12** In metal belts, the centrifugal tension F_c is ignored as negligible. Convince yourself that this is a reasonable problem simplification.
- 17-13** A designer has to select a metal-belt drive to transmit a power of H_{nom} under circumstances where a service factor of K_s and a design factor of n_d are appropriate. The design goal becomes $H_d = H_{\text{nom}} K_s n_d$. Use Eq. (17-8) to show that the minimum belt width is given by
- $$b_{\min} = \frac{1}{a} \left(\frac{33\,000 H_d}{V} \right) \frac{\exp f\theta}{\exp f\theta - 1}$$
- where a is the constant from $F_{1a} = ab$.
- 17-14** Design a friction metal flat-belt drive to connect a 1-hp, four-pole squirrel-cage motor turning at 1750 rev/min to a shaft 15 in away, running at half speed. The circumstances are such that a service factor of 1.2 and a design factor of 1.05 are appropriate. The life goal is 10^6 belt passes, $f = 0.35$, and the environmental considerations require a stainless steel belt.
- 17-15** A beryllium-copper metal flat belt with $S_f = 56.67$ kpsi is to transmit 5 hp at 1125 rev/min with a life goal of 10^6 belt passes between two shafts 20 in apart whose centerlines are in a horizontal plane. The coefficient of friction between belt and pulley is 0.32. The conditions are such that a service factor of 1.25 and a design factor of 1.1 are appropriate. The driven shaft rotates at one-third the motor-pulley speed. Specify your belt, pulley sizes, and initial tension at installation.
- 17-16** For the conditions of Prob. 17-15 use a 1095 plain carbon-steel heat-treated belt. Conditions at the driving pulley hub require a pulley outside diameter of 3 in or more. Specify your belt, pulley sizes, and initial tension at installation.
- 17-17** A single V belt is to be selected to deliver engine power to the wheel-drive transmission of a riding tractor. A 5-hp single-cylinder engine is used. At most, 60 percent of this power is transmitted to the belt. The driving sheave has a diameter of 6.2 in, the driven, 12.0 in. The belt selected should be as close to a 92-in pitch length as possible. The engine speed is governor-controlled to a maximum of 3100 rev/min. Select a satisfactory belt and assess the factor of safety and the belt life in passes.
- 17-18** Two B85 V belts are used in a drive composed of a 5.4-in driving sheave, rotating at 1200 rev/min, and a 16-in driven sheave. Find the power capacity of the drive based on a service factor of 1.25, and find the center-to-center distance.
- 17-19** A 60-hp four-cylinder internal combustion engine is used to drive a brick-making machine under a schedule of two shifts per day. The drive consists of two 26-in sheaves spaced about 12 ft apart, with a sheave speed of 400 rev/min. Select a V-belt arrangement. Find the factor of safety, and estimate the life in passes and hours.
- 17-20** A reciprocating air compressor has a 5-ft-diameter flywheel 14 in wide, and it operates at 170 rev/min. An eight-pole squirrel-cage induction motor has nameplate data 50 bhp at 875 rev/min.
- (a) Design a V-belt drive.
- (b) Can cutting the V-belt grooves in the flywheel be avoided by using a V-flat drive?
- 17-21** The geometric implications of a V-flat drive are interesting.
- (a) If the earth's equator was an inextensible string, snug to the spherical earth, and you spliced 6 ft of string into the equatorial cord and arranged it to be concentric to the equator, how far off the ground is the string?

- (b) Using the solution to part *a*, formulate the modifications to the expressions for m_G , θ_d and θ_D , L_p , and C .
- (c) As a result of this exercise, how would you revise your solution to part *b* of Prob. 17–20?

17–22 A 2-hp electric motor running at 1720 rev/min is to drive a blower at a speed of 240 rev/min. Select a V-belt drive for this application and specify standard V belts, sheave sizes, and the resulting center-to-center distance. The motor size limits the center distance to at least 22 in.

17–23 The standard roller-chain number indicates the chain pitch in inches, construction proportions, series, and number of strands as follows:



This convention makes the pitch directly readable from the chain number. In Ex. 17–5 ascertain the pitch from the selected chain number and confirm from Table 17–19.

17–24 Equate Eqs. (17–32) and (17–33) to find the rotating speed n_1 at which the power equates and marks the division between the premaximum and the postmaximum power domains.

(a) Show that

$$n_1 = \left[\frac{0.25(10^6)K_r N_1^{0.42}}{p^{(2.2-0.07p)}} \right]^{1/2.4}$$

(b) Find the speed n_1 for a no. 60 chain, $p = 0.75$ in, $N_1 = 17$, $K_r = 17$, and confirm from Table 17–20.

(c) At which speeds is Eq. (17–40) applicable?

17–25 A double-strand no. 60 roller chain is used to transmit power between a 13-tooth driving sprocket rotating at 300 rev/min and a 52-tooth driven sprocket.

- (a) What is the allowable horsepower of this drive?
- (b) Estimate the center-to-center distance if the chain length is 82 pitches.
- (c) Estimate the torque and bending force on the driving shaft by the chain if the actual horsepower transmitted is 30 percent less than the corrected (allowable) power.

17–26 A four-strand no. 40 roller chain transmits power from a 21-tooth driving sprocket to an 84-tooth driven sprocket. The angular speed of the driving sprocket is 2000 rev/min.

- (a) Estimate the chain length if the center-to-center distance has to be about 20 in.
- (b) Estimate the tabulated horsepower entry H'_{tab} for a 20 000-h life goal.
- (c) Estimate the rated (allowable) horsepower that would appear in Table 17–20 for a 20 000-h life.
- (d) Estimate the tension in the chain at the allowable power.

17–27 A 700 rev/min 25-hp squirrel-cage induction motor is to drive a two-cylinder reciprocating pump, out-of-doors under a shed. A service factor K_s of 1.5 and a design factor of 1.1 are appropriate. The pump speed is 140 rev/min. Select a suitable chain and sprocket sizes.

17–28 A centrifugal pump is driven by a 50-hp synchronous motor at a speed of 1800 rev/min. The pump is to operate at 900 rev/min. Despite the speed, the load is smooth ($K_s = 1.2$). For a design factor of 1.1 specify a chain and sprockets that will realize a 50 000-h life goal. Let the sprockets be 19T and 38T.

- 17-29** A mine hoist uses a 2-in 6×19 monitor-steel wire rope. The rope is used to haul loads of 4 tons from the shaft 480 ft deep. The drum has a diameter of 6 ft, the sheaves are of good-quality cast steel, and the smallest is 3 ft in diameter.
- (a) Using a maximum hoisting speed of 1200 ft/min and a maximum acceleration of 2 ft/s^2 , estimate the stresses in the rope.
- (b) Estimate the various factors of safety.
- 17-30** A temporary construction elevator is to be designed to carry workers and materials to a height of 90 ft. The maximum estimated load to be hoisted is 5000 lbf at a velocity not to exceed 2 ft/s. For minimum sheave diameters and acceleration of 4 ft/s^2 , specify the number of ropes required if the 1-in plow-steel 6×19 hoisting strand is used.
- 17-31** A 2000-ft mine hoist operates with a 72-in drum using 6×19 monitor-steel wire rope. The cage and load weigh 8000 lbf, and the cage is subjected to an acceleration of 2 ft/s^2 when starting.
- (a) For a single-strand hoist how does the factor of safety $n = F_f / F_t$ vary with the choice of rope diameter?
- (b) For four supporting strands of wire rope attached to the cage, how does the factor of safety vary with the choice of rope diameter?
- 17-32** Generalize the results of Prob. 17-31 by representing the factor of safety n as

$$n = \frac{ad}{(b/m) + cd^2}$$

where m is the number of ropes supporting the cage, and a , b , and c are constants. Show that the optimal diameter is $d^* = [b/(mc)]^{1/2}$ and the corresponding maximum attainable factor of safety is $n^* = a[m/(bc)]^{1/2}/2$.

- 17-33** From your results in Prob. 17-32, show that to meet a fatigue factor of safety n_1 the optimal solution is

$$m = \frac{4bcn_1}{a^2} \text{ ropes}$$

having a diameter of

$$d = \frac{a}{2cn_1}$$

Solve Prob. 17-31 if a factor of safety of 2 is required. Show what to do in order to accommodate to the necessary discreteness in the rope diameter d and the number of ropes m .

- 17-34** For Prob. 17-29 estimate the elongation of the rope if a 9000-lbf loaded mine cart is placed on the cage. The results of Prob. 4-6 may be useful.

Computer Programs

In approaching the ensuing computer problems, the following suggestions may be helpful:

- Decide whether an analysis program or a design program would be more useful. In problems as simple as these, you will find the programs similar. For maximum instructional benefit, try the design problem.
- Creating a design program without a figure of merit precludes ranking alternative designs but does not hinder the attainment of satisfactory designs. Your instructor can provide the class design library with commercial catalogs, which not only have price information but define available sizes.

- Quantitative understanding and logic of interrelations are required for programming. Difficulty in programming is a signal to you and your instructor to increase your understanding. The following programs can be accomplished in 100 to 500 lines of code.
- Make programs interactive and user-friendly.
- Let the computer do what it can do best; the user should do what a human can do best.
- Assume the user has a copy of the text and can respond to prompts for information.
- If interpolating in a table is in order, solicit table entries in the neighborhood, and let the computer crunch the numbers.
- In decision steps, allow the user to make the necessary decision, even if it is undesirable. This allows learning of consequences and the use of the program for analysis.
- Display a lot of information in the summary. Show the decision set used up-front for user perspective.
- When a summary is complete, adequacy assessment can be accomplished with ease, so consider adding this feature.

17–35 Your experience with Probs. 17–1 through 17–11 has placed you in a position to write an interactive computer program to design/select flat-belt drive components. A possible decision set is

A Priori Decisions

- Function: H_{nom} , rev/min, velocity ratio, approximate C
- Design factor: n_d
- Initial tension maintenance: catenary
- Belt material: t , d_{min} , allowable tension, density, f
- Drive geometry: d , D
- Belt thickness: t (in material decision)

Design Decisions

- Belt width: b

17–36 Problems 17–12 through 17–16 have given you some experience with flat metal friction belts, indicating that a computer program could be helpful in the design/selection process. A possible decision set is

A Priori Decisions

- Function: H_{nom} , rev/min, velocity ratio approximate C
- Design factor: n_d
- Belt material: S_y , E , ν , d_{min}
- Drive geometry: d , D
- Belt thickness: t

Design Decisions

- Belt width: b
- Length of belt (often standard loop periphery)

17-37 Problems 17-17 through 17-22 have given you enough experience with V belts to convince you that a computer program would be helpful in the design/selection of V-belt drive components. Write such a program.

17-38 Experience with Probs. 17-23 through 17-28 can suggest an interactive computer program to help in the design/selection process of roller-chain elements. A possible decision set is

A Priori Decisions

- Function: power, speed, space, K_s , life goal
- Design factor: n_d
- Sprocket tooth counts: N_1, N_2, K_1, K_2

Design Decisions

- Chain number
- Strand count
- Lubrication system
- Chain length in pitches
(center-to-center distance for reference)

18

Power Transmission Case Study

Chapter Outline

- 18-1** Design Sequence for Power Transmission **915**
- 18-2** Power and Torque Requirements **916**
- 18-3** Gear Specification **916**
- 18-4** Shaft Layout **923**
- 18-5** Force Analysis **925**
- 18-6** Shaft Material Selection **925**
- 18-7** Shaft Design for Stress **926**
- 18-8** Shaft Design for Deflection **926**
- 18-9** Bearing Selection **927**
- 18-10** Key and Retaining Ring Selection **928**
- 18-11** Final Analysis **931**

Transmission of power from a source, such as an engine or motor, through a machine to an output actuation is one of the most common machine tasks. An efficient means of transmitting power is through rotary motion of a shaft that is supported by bearings. Gears, belt pulleys, or chain sprockets may be incorporated to provide for torque and speed changes between shafts. Most shafts are cylindrical (solid or hollow), and include stepped diameters with shoulders to accommodate the positioning and support of bearings, gears, etc.

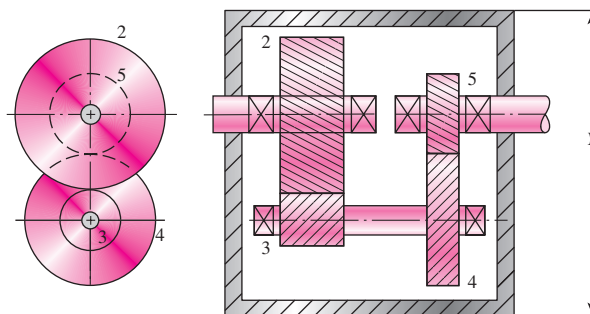
The design of a system to transmit power requires attention to the design and selection of individual components (gears, bearings, shaft, etc.). However, as is often the case in design, these components are not independent. For example, in order to design the shaft for stress and deflection, it is necessary to know the applied forces. If the forces are transmitted through gears, it is necessary to know the gear specifications in order to determine the forces that will be transmitted to the shaft. But stock gears come with certain bore sizes, requiring knowledge of the necessary shaft diameter. It is no surprise that the design process is interdependent and iterative, but where should a designer start?

The nature of machine design textbooks is to focus on each component separately. This chapter will focus on an overview of a power transmission system design, demonstrating how to incorporate the details of each component into an overall design process. A typical two-stage gear reduction such as shown in Fig. 18–1 will be assumed for this discussion. The design sequence is similar for variations of this particular transmission system.

The following outline will help clarify a logical design sequence. Discussion of how each part of the outline affects the overall design process will be given in sequence in this chapter. Details on the specifics for designing and selecting major components are covered in separate chapters, particularly Chap. 7 on shaft design, Chap. 11 on bearing selection, and Chaps. 13 and 14 on gear specification. A complete case study is presented as a specific vehicle to demonstrate the process.

Figure 18-1

A compound reverted gear train.



CASE STUDY PART 1 PROBLEM SPECIFICATION

Section 1-16, p. 23, presents the background for this case study involving a speed reducer. A two-stage, compound reverted gear train such as shown in Fig. 18-1 will be designed. In this chapter, the design of the intermediate shaft and its components is presented, taking into account the other shafts as necessary.

A subset of the pertinent design specifications that will be needed for this part of the design are given here.

Power to be delivered: 20 hp

Input speed: 1750 rpm

Output speed: 82–88 rev/min

Usually low shock levels, occasional moderate shock

Input and output shafts extend 4 in outside gearbox

Maximum gearbox size: 22 in × 14 in × 14 in

Output shaft and input shaft in-line

Gear and bearing life > 12 000 hours; infinite shaft life

18–1 Design Sequence for Power Transmission

There is not a precise sequence of steps for any design process. By nature, design is an iterative process in which it is necessary to make some tentative choices, and to build a skeleton of a design, and to determine which parts of the design are critical. However, much time can be saved by understanding the dependencies between the parts of the problem, allowing the designer to know what parts will be affected by any given change. In this section, only an outline is presented, with a short explanation of each step. Further details will be discussed in the following sections.

- *Power and torque requirements.* Power considerations should be addressed first, as this will determine the overall sizing needs for the entire system. Any necessary speed or torque ratio from input to output must be determined before addressing gear/pulley sizing.
- *Gear specification.* Necessary gear ratios and torque transmission issues can now be addressed with selection of appropriate gears. Note that a full force analysis of the shafts is not yet needed, as only the transmitted loads are required to specify the gears.
- *Shaft layout.* The general layout of the shaft, including axial location of gears and bearings must now be specified. Decisions on how to transmit the torque from the gears to the shaft need to be made (keys, splines, etc.), as well as how to hold gears and bearings in place (retaining rings, press fits, nuts, etc.). However, it is not necessary at this point to size these elements, since their standard sizes allow estimation of stress concentration factors.
- *Force analysis.* Once the gear/pulley diameters are known, and the axial locations of the gears and bearings are known, the free-body, shear force, and bending moment diagrams for the shafts can be produced. Forces at the bearings can be determined.
- *Shaft material selection.* Since fatigue design depends so heavily on the material choice, it is usually easier to make a reasonable material selection first, then check for satisfactory results.
- *Shaft design for stress (fatigue and static).* At this point, a stress design of the shaft should look very similar to a typical design problem from the shaft chapter (Chap. 7). Shear force and bending moment diagrams are known, critical locations can be predicted, approximate stress concentrations can be used, and estimates for shaft diameters can be determined.

- *Shaft design for deflection.* Since deflection analysis is dependent on the entire shaft geometry, it is saved until this point. With all shaft geometry now estimated, the critical deflections at the bearing and gear locations can be checked by analysis.
- *Bearing selection.* Specific bearings from a catalog may now be chosen to match the estimated shaft diameters. The diameters can be adjusted slightly as necessary to match the catalog specifications.
- *Key and retaining ring selection.* With shaft diameters settling in to stable values, appropriate keys and retaining rings can be specified in standard sizes. This should make little change in the overall design if reasonable stress concentration factors were assumed in previous steps.
- *Final analysis.* Once everything has been specified, iterated, and adjusted as necessary for any specific part of the task, a complete analysis from start to finish will provide a final check and specific safety factors for the actual system.

18–2 Power and Torque Requirements

Power transmission systems will typically be specified by a power capacity, for example, a 40-horsepower gearbox. This rating specifies the combination of torque and speed that the unit can endure. Remember that, in the ideal case, *power in* equals *power out*, so that we can refer to the power being the same throughout the system. In reality, there are small losses due to factors like friction in the bearings and gears. In many transmission systems, the losses in the rolling bearings will be negligible. Gears have a reasonably high efficiency, with about 1 to 2 percent power loss in a pair of meshed gears. Thus, in the double-reduction gearbox in Fig. 18–1, with two pairs of meshed gears the output power is likely to be about 2 to 4 percent less than the input power. Since this is a small loss, it is common to speak of simply the power of the system, rather than input power and output power. Flat belts and timing belts have efficiencies typically in the mid to upper 90 percent range. V belts and worm gears have efficiencies that may dip much lower, requiring a distinction between the necessary input power to obtain a desired output power.

Torque, on the other hand, is typically not constant throughout a transmission system. Remember that power equals the product of torque and speed. Since *power in* = *power out*, we know that for a gear train

$$H = T_i \omega_i = T_o \omega_o \quad (18-1)$$

With a constant power, a gear ratio to decrease the angular velocity will simultaneously increase torque. The gear ratio, or train value, for the gear train is

$$e = \omega_o / \omega_i = T_i / T_o \quad (18-2)$$

A typical power transmission design problem will specify the desired power capacity, along with either the input and output angular velocities, or the input and output torques. There will usually be a tolerance specified for the output values. After the specific gears are specified, the actual output values can be determined.

18–3 Gear Specification

With the gear train value known, the next step is to determine appropriate gears. As a rough guideline, a train value of up to 10 to 1 can be obtained with one pair of gears. Greater ratios can be obtained by compounding additional pairs of gears (See Sec. 13–13, p. 678). The compound reverted gear train in Fig. 18–1 can obtain a train value of up to 100 to 1.

Since numbers of teeth on gears must be integers, it is best to design with teeth numbers rather than diameters. See Ex. 13–3, 13–4, and 13–5, pp. 680–682, for details on designing appropriate numbers of teeth to satisfy the gear train value and any necessary geometry condition, such as in-line condition of input and output shaft. Care should be taken at this point to find the best combination of teeth numbers to minimize the overall package size. If the train value only needs to be approximate, use this flexibility to try different options of teeth numbers to minimize the package size. A difference of one tooth on the smallest gear can result in a significant increase in size of the overall package.

If designing for large production quantities, gears can be purchased in large enough quantities that it is not necessary to worry about preferred sizes. For small lot production, consideration should be given to the tradeoffs between smaller gearbox size and extra cost for odd gear sizes that are difficult to purchase off the shelf. If stock gears are to be used, their availability in prescribed numbers of teeth with anticipated diametral pitch should be checked at this time. If necessary, iterate the design for numbers of teeth that are available.

CASE STUDY PART 2 SPEED, TORQUE, AND GEAR RATIOS

Continue the case study by determining appropriate tooth counts to reduce the input speed of $\omega_i = 1750$ rev/min to an output speed within the range

$$82 \text{ rev/min} < \omega_o < 88 \text{ rev/min}$$

Once final tooth counts are specified, determine values of

- Speeds for the intermediate and output shafts
- Torques for the input, intermediate and output shafts, to transmit 20 hp.

Solution

Use the notation for gear numbers from Fig. 18-1. Choose mean value for initial design, $\omega_5 = 85$ rev/min.

$$e = \frac{\omega_5}{\omega_2} = \frac{85}{1750} = \frac{1}{20.59} \quad \text{Eq. (18-2)}$$

For a compound reverted geartrain,

$$e = \frac{1}{20.59} = \frac{N_2 N_4}{N_3 N_5} \quad \text{Eq. (13-30), p. 679}$$

For smallest package size, let both stages be the same reduction. Also, by making the two stages identical, the in-line condition on the input and output shaft will automatically be satisfied.

$$\frac{N_2}{N_3} = \frac{N_4}{N_5} = \sqrt{\frac{1}{20.59}} = \frac{1}{4.54}$$

For this ratio, the minimum number of teeth from Eq. (13-11), p. 666, is 16.

$$N_2 = N_4 = 16 \text{ teeth}$$

$$N_3 = 4.54(N_2) = 72.64$$

Try rounding down and check if ω_5 is within limits.

$$\omega_5 = \left(\frac{16}{72}\right) \left(\frac{16}{72}\right) (1750) = 86.42 \text{ rev/min} \quad \text{Acceptable}$$

Proceed with

$$N_2 = N_4 = 16 \text{ teeth}$$

$$N_3 = N_5 = 72 \text{ teeth}$$

$$e = \left(\frac{16}{72}\right) \left(\frac{16}{72}\right) = \frac{1}{20.25}$$

$$\omega_5 = 86.42 \text{ rev/min}$$

$$\omega_3 = \omega_4 = \left(\frac{16}{72}\right) (1750) = 388.9 \text{ rev/min}$$

To determine the torques, return to the power relationship,

$$H = T_2 \omega_2 = T_5 \omega_5 \quad \text{Eq. (18-1)}$$

$$T_2 = H / \omega_2 = \left(\frac{20 \text{ hp}}{1750 \text{ rev/min}}\right) \left(550 \frac{\text{ft}\cdot\text{lb}/\text{s}}{\text{hp}}\right) \left(\frac{1 \text{ rev}}{2\pi \text{ rad}}\right) \left(60 \frac{\text{s}}{\text{min}}\right)$$

$$T_2 = 60.0 \text{ lbf}\cdot\text{ft}$$

$$T_3 = T_2 \frac{\omega_2}{\omega_3} = 60.0 \frac{1750}{388.9} = 270 \text{ lbf}\cdot\text{ft}$$

$$T_5 = T_2 \frac{\omega_2}{\omega_5} = 60.0 \frac{1750}{86.42} = 1215 \text{ lbf}\cdot\text{ft}$$

If a maximum size for the gearbox has been specified in the problem specification, a minimum diametral pitch (maximum tooth size) can be estimated at this point by writing an expression for gearbox size in terms of gear diameters, and converting to numbers of teeth through the diametral pitch. For example, from Fig. 18–1, the overall height of the gearbox is

$$Y = d_3 + d_2/2 + d_5/2 + 2/P + \text{clearances} + \text{wall thicknesses}$$

where the $2/P$ term accounts for the addendum height of the teeth on gears 2 and 5 that extend beyond the pitch diameters. Substituting $d_i = N_i/P$ gives

$$Y = N_3/P + N_2/(2P) + N_5/(2P) + 2/P + \text{clearances} + \text{wall thicknesses}$$

Solving this for P , we find

$$P = (N_3 + N_2/2 + N_5/2 + 2)/(Y - \text{clearances} - \text{wall thicknesses}) \quad (18-3)$$

This is the minimum value that can be used for diametral pitch, and therefore the maximum tooth size, to stay within the overall gearbox constraint. It should be rounded up to the next standard diametral pitch, which reduces the maximum tooth size.

The AGMA approach, as described in Chap. 14, for both bending and contact stress should be applied next to determine suitable gear parameters. The primary design parameters to be specified by the designer include material, diametral pitch, and face width. A recommended procedure is to start with an estimated diametral pitch. This allows determination of gear diameters ($d = N/P$), pitch-line velocities [Eq. (13–34), p. 687], and transmitted loads [Eq. (13–35) or (13–36), p. 687]. Typical spur gears are available with face widths from 3 to 5 times the circular pitch p . Using an average of 4, a first estimate can be made for face width $F = 4p = 4\pi/P$. Alternatively, the designer can simply perform a quick search of on-line gear catalogs to find available face widths for the diametral pitch and number of teeth.

Next, the AGMA equations in Chap. 14 can be used to determine appropriate material choices to provide desired safety factors. It is generally most efficient to attempt to analyze the most critical gear first, as it will determine the limiting values of diametral pitch and material strength. Usually, the critical gear will be the smaller gear, on the high-torque (low-speed) end of the gearbox.

If the required material strengths are too high, such that they are either too expensive or not available, iteration with a smaller diametral pitch (larger tooth) will help. Of course, this will increase the overall gearbox size. Often the excessive stress will be in one of the small gears. Rather than increase the tooth size for all gears, it is sometimes better to reconsider the design of tooth counts, shifting more of the gear ratio to the pair of gears with less stress, and less ratio to the pair of gears with the excessive stress. This will allow the offending gear to have more teeth and therefore larger diameter, decreasing its stress.

If contact stress turns out to be more limiting than bending stress, consider gear materials that have been heat treated or case hardened to increase the surface strength. Adjustments can be made to the diametral pitch if necessary to achieve a good balance of size, material, and cost. If the stresses are all much lower than the material strengths, a larger diametral pitch is in order, which will reduce the size of the gears and the gearbox.

Everything up to this point should be iterated until acceptable results are obtained, as this portion of the design process can usually be accomplished independently from the next stages of the process. The designer should be satisfied with the gear selection before proceeding to the shaft. Selection of specific gears from catalogs at this point will be helpful in later stages, particularly in knowing overall width, bore size, recommended shoulder support, and maximum fillet radius.

CASE STUDY PART 3 GEAR SPECIFICATION

Continue the case study by specifying appropriate gears, including pitch diameter, diametral pitch, face width, and material. Achieve safety factors of at least 1.2 for wear and bending.

Solution

Estimate the minimum diametral pitch for overall gearbox height = 22 in.

From Eq. (18-3) and Fig. 18-1,

$$P_{\min} = \frac{\left(N_3 + \frac{N_2}{2} + \frac{N_5}{2} + 2\right)}{(Y - \text{clearances} - \text{wall thickness})}$$

Allow 1.5 in for clearances and wall thicknesses:

$$P_{\min} = \frac{\left(72 + \frac{16}{2} + \frac{72}{2} + 2\right)}{(22 - 1.5)} = 5.76 \text{ teeth/in}$$

Start with $P = 6$ teeth/in

$$d_2 = d_4 = N_2/P = 16/6 = 2.67 \text{ in}$$

$$d_3 = d_5 = 72/6 = 12.0 \text{ in}$$

Shaft speeds were previously determined to be

$$\omega_2 = 1750 \text{ rev/min} \quad \omega_3 = \omega_4 = 388.9 \text{ rev/min} \quad \omega_5 = 86.4 \text{ rev/min}$$

Get pitch-line velocities and transmitted loads for later use.

$$V_{23} = \frac{\pi d_2 \omega_2}{12} = \frac{\pi(2.67)(1750)}{12} = 1223 \text{ ft/min} \quad \text{Eq. (13-34), p. 687}$$

$$V_{45} = \frac{\pi d_5 \omega_5}{12} = 271.5 \text{ ft/min}$$

$$W'_{23} = 33000 \frac{H}{V_{23}} = 33000 \left(\frac{20}{1223}\right) = 540.0 \text{ lbf} \quad \text{Eq. (13-35), p. 687}$$

$$W'_{45} = 33000 \frac{H}{V_{45}} = 2431 \text{ lbf}$$

Start with gear 4, since it is the smallest gear, transmitting the largest load. It will likely be critical. Start with wear by contact stress, since it is often the limiting factor.

Gear 4 Wear

$$I = \frac{\cos 20^\circ \sin 20^\circ}{2(1)} \left(\frac{4.5}{4.5 + 1}\right) = 0.1315 \quad \text{Eq. (14-23), p. 735}$$

$$\text{For } K_v, \text{ assume } Q_v = 7, B = 0.731, A = 65.1 \quad \text{Eq. (14-29), p. 736}$$

$$K_v = \left(\frac{65.1 + \sqrt{271.5}}{65.1}\right)^{0.731} = 1.18 \quad \text{Eq. (14-27), p. 736}$$

Face width F is typically from 3 to 5 times circular pitch. Try

$$F = 4 \left(\frac{\pi}{P}\right) = 4 \left(\frac{\pi}{6}\right) = 2.09 \text{ in.}$$

Since gear specifications are readily available on the Internet, we might as well check for commonly available face widths. On www.globalspec.com, entering $P = 6$ teeth/in and $d = 2.67$ in, stock spur gears from several sources have face widths of 1.5 in or 2.0 in. These are also available for the meshing gear 5 with $d = 12$ in.

Choose $F = 2.0$ in.

$$\text{For } K_m, \quad C_{pf} = 0.0624 \quad \text{Eq. (14-32), p. 740}$$

$$C_{mc} = 1 \text{ uncrowned teeth} \quad \text{Eq. (14-31), p. 740}$$

$$C_{pm} = 1 \text{ straddle-mounted} \quad \text{Eq. (14-33), p. 740}$$

$$C_{ma} = 0.15 \text{ commercial enclosed unit} \quad \text{Eq. (14-34), p. 740}$$

$$C_e = 1 \quad \text{Eq. (14-35), p. 740}$$

$$K_m = 1.21 \quad \text{Eq. (14-30), p. 739}$$

$$C_p = 2300 \quad \text{Table 14-8, p. 737}$$

$$K_o = K_s = C_f = 1$$

$$\sigma_c = 2300 \sqrt{\frac{2431(1.18)(1.21)}{2.67(2)(0.1315)}} = \underline{161\,700 \text{ psi}} \quad \text{Eq. (14-16), p. 726}$$

Get factors for $\sigma_{c.all}$. For life factor Z_N , get number of cycles for specified life of 12 000 h.

$$L_4 = (12\,000 \text{ h}) \left(60 \frac{\text{min}}{\text{h}}\right) \left(389 \frac{\text{rev}}{\text{min}}\right) = 2.8 \times 10^8 \text{ rev}$$

$$Z_N = 0.9 \quad \text{Fig. 14-15, p. 743}$$

$$K_R = K_T = C_H = 1$$

For a design factor of 1.2,

$$\sigma_{c.all} = S_c Z_N / S_H = \sigma_c \quad \text{Eq. (14-18), p. 730}$$

$$S_c = \frac{S_H \sigma_c}{Z_N} = \frac{1.2(161\,700)}{0.9} = \underline{215\,600 \text{ psi}}$$

From Table 14-6, p. 731, this strength is achievable with Grade 2 carburized and hardened with $S_c = 225\,000 \text{ psi}$. To find the achieved factor of safety, $n_c = \sigma_{c.all} / \sigma_c$ with $S_H = 1$. The factor of safety for wear of gear 4 is

$$n_c = \frac{\sigma_{c.all}}{\sigma_c} = \frac{S_c Z_N}{\sigma_c} = \frac{225\,000(0.9)}{161\,700} = \underline{1.25}$$

Gear 4 Bending

$$J = 0.27 \quad \text{Fig. 14-6, p. 733}$$

$$K_B = 1$$

Everything else is the same as before.

$$\sigma = W_t K_v \frac{P_d K_m}{F J} = (2431)(1.18) \left(\frac{6}{2}\right) \left(\frac{1.21}{0.27}\right) \quad \text{Eq. (14-15), p. 726}$$

$$\underline{\sigma = 38\,570 \text{ psi}}$$

$$Y_N = 0.9 \quad \text{Fig. 14-14, p. 743}$$

Using Grade 2 carburized and hardened, same as chosen for wear, find $S_t = 65\,000$ psi (Table 14-3, p. 728).

$$\sigma_{\text{all}} = S_t Y_N = 58\,500 \text{ psi}$$

The factor of safety for bending of gear 4 is

$$n = \frac{\sigma_{\text{all}}}{\sigma} = \frac{58\,500}{38\,570} = 1.52$$

Gear 5 Bending and Wear

Everything is the same as for gear 4, except J , Y_N , and Z_N .

$$J = 0.41$$

Fig. 14-6, p. 733

$$L_5 = (12\,000\text{h})(60 \text{ min/h})(86.4 \text{ rev/min}) = 6.2 \times 10^7 \text{ rev}$$

$$Y_N = 0.97$$

Fig. 14-14, p. 743

$$Z_N = 1.0$$

Fig. 14-15, p. 743

$$\sigma_c = 2300 \sqrt{\frac{2431(1.18)(1.21)}{12(2)(0.1315)}} = 76\,280 \text{ psi}$$

$$\sigma = (2431)(1.18) \left(\frac{6}{2}\right) \left(\frac{1.21}{0.41}\right) = 25\,400 \text{ psi}$$

Choose a Grade 1 steel, through-hardened to 250 H_B . From Fig. 14-2, p. 727, $S_t = 32\,000$ psi and from Fig. 14-5, p. 730, $S_c = 110\,000$ psi.

$$n_c = \frac{\sigma_{c,\text{all}}}{\sigma_c} = \frac{110\,000}{76\,280} = 1.44$$

$$n = \frac{\sigma_{\text{all}}}{\sigma} = \frac{32\,000(.97)}{25\,400} = 1.22$$

Gear 2 Wear

Gears 2 and 3 are evaluated similarly. Only selected results are shown.

$$K_v = 1.37$$

Try $F = 1.5$ in, since the loading is less on gears 2 and 3.

$$K_m = 1.19$$

All other factors are the same as those for gear 4.

$$\sigma_c = 2300 \sqrt{\frac{(539.7)(1.37)(1.19)}{2.67(1.5)(0.1315)}} = 94\,000 \text{ psi}$$

$$L_2 = (12\,000 \text{ h})(60 \text{ min/h})(1750 \text{ rev/min}) = 1.26 \times 10^9 \text{ rev} \quad Z_N = 0.8$$

Try grade 1 flame-hardened, $S_c = 170\,000$ psi

$$n_c = \frac{\sigma_{c,\text{all}}}{\sigma_c} = \frac{170\,000(0.8)}{94\,000} = 1.40$$

Gear 2 Bending

$$J = 0.27 \quad Y_N = 0.88$$

$$\sigma = 539.7(1.37) \frac{(6)(1.19)}{(1.5)(0.27)} = 13\,040 \text{ psi}$$

$$n = \frac{\sigma_{\text{all}}}{\sigma} = \frac{45\,000(0.88)}{13\,040} = 3.04$$

Gear 3 Wear and Bending

$$J = 0.41 \quad Y_N = 0.9 \quad Z_N = 0.9$$

$$\sigma_c = 2300 \sqrt{\frac{(539.7)(1.37)(1.19)}{12(1.5)(0.1315)}} = 44\,340 \text{ psi}$$

$$\sigma = 539.7(1.37) \frac{(6)(1.19)}{1.5(0.41)} = 8584 \text{ psi}$$

Try Grade 1 steel, through-hardened to 200 H_B . From Fig. 14-2, p. 727, $S_t = 28\,000$ psi and from Fig. 14-5, p. 730, $S_c = 90\,000$ psi.

$$n_c = \frac{90\,000(0.9)}{44\,340} = 1.83$$

$$n = \frac{\sigma_{\text{all}}}{\sigma} = \frac{28\,000(0.9)}{8584} = 2.94$$

In summary, the resulting gear specifications are:

All gears, $P = 6$ teeth/in

Gear 2, Grade 1 flame-hardened, $S_c = 170\,000$ psi and $S_t = 45\,000$ psi

$d_2 = 2.67$ in, face width = 1.5 in

Gear 3, Grade 1 through-hardened to 200 H_B , $S_c = 90\,000$ psi and $S_t = 28\,000$ psi

$d_3 = 12.0$ in, face width = 1.5 in

Gear 4, Grade 2 carburized and hardened, $S_c = 225\,000$ psi and $S_t = 65\,000$ psi

$d_4 = 2.67$ in, face width = 2.0 in

Gear 5, Grade 1 through-hardened to 250 H_B , $S_c = 110\,000$ psi and $S_t = 31\,000$ psi

$d_5 = 12.0$ in, face width = 2.0 in

18-4 Shaft Layout

The general layout of the shafts, including axial location of gears and bearings, must now be specified in order to perform a free-body force analysis and to obtain shear force and bending moment diagrams. If there is no existing design to use as a starter, then the determination of the shaft layout may have many solutions. Section 7-3, p. 349, discusses the issues involved in shaft layout. In this section the focus will be on how the decisions relate to the overall process.

A free-body force analysis can be performed without knowing shaft diameters, but can not be performed without knowing axial distances between gears and bearings. It is extremely important to keep axial distances small. Even small forces can create large bending moments if the moment arms are large. Also, recall that beam deflection equations typically include length terms raised to the third power.

It is worth examining the entirety of the gearbox at this time, to determine what factors drive the length of the shaft and the placement of the components. A rough sketch, such as shown in Fig. 18-2, is sufficient for this purpose.

CASE STUDY PART 4 SHAFT LAYOUT

Continue the case study by preparing a sketch of the gearbox sufficient to determine the axial dimensions. In particular, estimate the overall length, and the distance between the gears of the intermediate shaft, in order to fit with the mounting requirements of the other shafts.

Solution

Fig. 18-2 shows the rough sketch. It includes all three shafts, with consideration of how the bearings are to mount in the case. The gear widths are known at this point. Bearing widths are guessed, allowing a little more space for larger bearings on the intermediate shaft where bending moments will be greater. Small changes in bearing widths will have minimal effect on the force analysis, since the location of the ground reaction force will change very little. The 4-in distance between the two gears on the countershaft is dictated by the requirements of the input and output shafts, including the space for the case to mount the bearings. Small allotments are given for the retaining rings, and for space behind the bearings. Adding it all up gives the intermediate shaft length as 11.5 in.

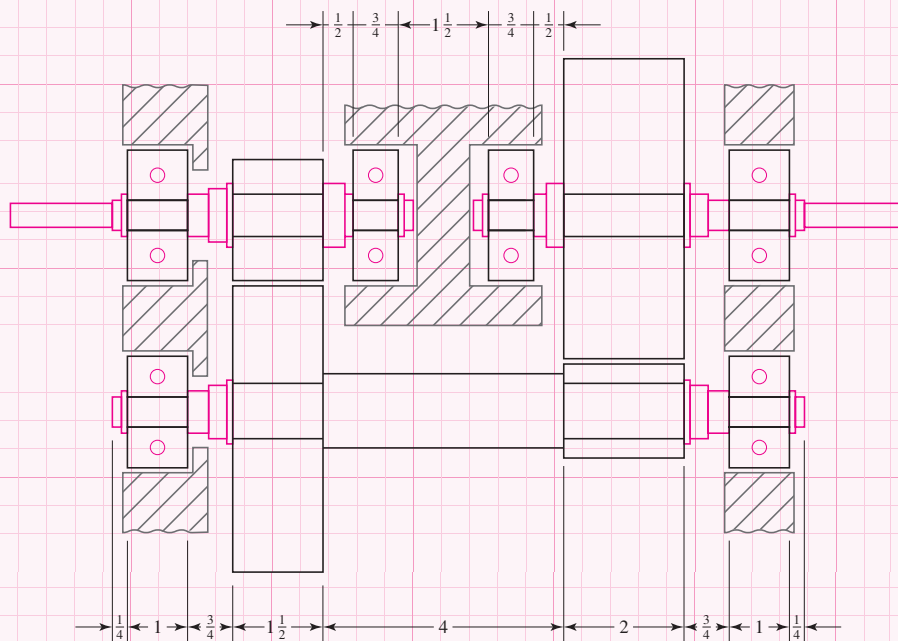


Figure 18-2

Sketch for shaft layout. Dimensions are in inches.

Wider face widths on gears require more shaft length. Originally, gears with hubs were considered for this design to allow the use of set screws instead of high-stress-concentration retaining rings. However, the extra hub lengths added several inches to the shaft lengths and the gearbox housing.

Several points are worth noting in the layout in Fig. 18–2. The gears and bearings are positioned against shoulders, with retaining rings to hold them in position. While it is desirable to place gears near the bearings, a little extra space is provided between them to accommodate any housing that extends behind the bearing, and to allow for a bearing puller to have space to access the back of the bearing. The extra change in diameter between the bearings and the gears allows the shoulder height for the bearing and the bore size for the gear to be different. This diameter can have loose tolerances and large fillet radius.

Each bearing is restrained axially on its shaft, but only one bearing on each shaft is axially fixed in the housing, allowing for slight axial thermal expansion of the shafts.

18–5 Force Analysis

Once the gear diameters are known, and the axial locations of the components are set, the free-body diagrams and shear force and bending moment diagrams for the shafts can be produced. With the known transmitted loads, determine the radial and axial loads transmitted through the gears (see Secs. 13–14 through 13–17, pp. 685–694). From summation of forces and moments on each shaft, ground reaction forces at the bearings can be determined. For shafts with gears and pulleys, the forces and moments will usually have components in two planes along the shaft. For rotating shafts, usually only the resultant magnitude is needed, so force components at bearings are summed as vectors. Shear force and bending moment diagrams are usually obtained in two planes, then summed as vectors at any point of interest. A torque diagram should also be generated to clearly visualize the transfer of torque from an input component, through the shaft, and to an output component.

See the beginning of Ex. 7–2, p. 361, for the force analysis portion of the case study for the intermediate shaft. The bending moment is largest at gear 4. This is predictable, since gear 4 is smaller, and must transmit the same torque that entered the shaft through the much larger gear 3.

While the force analysis is not difficult to perform manually, if beam software is to be used for the deflection analysis, it will necessarily calculate reaction forces, along with shear force and bending moment diagrams in the process of calculating deflections. The designer can enter guessed values for diameters into the software at this point, just to get the force information, and later enter actual diameters to the same model to determine deflections.

18–6 Shaft Material Selection

A trial material for the shaft can be selected at any point before the stress design of the shaft, and can be modified as necessary during the stress design process. Section 7–2, p. 348, provides details for decisions regarding material selection. For the case study, an inexpensive steel, 1020 CD, is initially selected. After the stress analysis, a slightly higher strength 1050 CD is chosen to reduce the critical stresses without further increasing the shaft diameters.

18–7 Shaft Design for Stress

The critical shaft diameters are to be determined by stress analysis at critical locations. Section 7–4, p. 354, provides a detailed examination of the issues involved in shaft design for stress.

CASE STUDY PART 5 DESIGN FOR STRESS

Proceed with the next phase of the case study design, in which appropriate diameters for each section of the shaft are estimated, based on providing sufficient fatigue and static stress capacity for infinite life of the shaft, with minimum safety factor of 1.5.

Solution

The solution to this phase of the design is presented in Ex. 7–2, p. 361.

Since the bending moment is highest at gear 4, potentially critical stress points are at its shoulder, keyway, and retaining ring groove. It turns out that the keyway is the critical location. It seems that shoulders often get the most attention. This example demonstrates the danger of neglecting other stress concentration sources, such as keyways.

The material choice was changed in the course of this phase, choosing to pay for a higher strength to limit the shaft diameter to 2 in. If the shaft were to get much bigger, the small gear would not be able to provide an adequate bore size. If it becomes necessary to increase the shaft diameter any more, the gearing specification will need to be redesigned.

18–8 Shaft Design for Deflection

Section 7–5, p. 367, provides a detailed discussion of deflection considerations for shafts. Typically, a deflection problem in a shaft will not cause catastrophic failure of the shaft, but will lead to excess noise and vibration, and premature failure of the gears or bearings.

CASE STUDY PART 6 DEFLECTION CHECK

Proceed with the next phase of the case study by checking that deflections and slopes at the gears and bearings on the intermediate shaft are within acceptable ranges.

Solution

The solution to this phase of the design is presented in Ex. 7–3, p. 368.

It turns out that in this problem all the deflections are within recommended limits for bearings and gears. This is not always the case, and it would be a poor choice to neglect the deflection analysis. In a first iteration of this case study, with longer shafts due to using gears with hubs, the deflections were more critical than the stresses.

18–9 Bearing Selection

Bearing selection is straightforward now that the bearing reaction forces and the approximate bore diameters are known. See Chap. 11 for general details on bearing selection. Rolling-contact bearings are available with a wide range of load capacities and dimensions, so it is usually not a problem to find a suitable bearing that is close to the estimated bore diameter and width.

CASE STUDY PART 7 BEARING SELECTION

Continue the case study by selecting appropriate bearings for the intermediate shaft, with a reliability of 99 percent. The problem specifies a design life of 12 000 h. The intermediate shaft speed is 389 rev/min. The estimated bore size is 1 in, and the estimated bearing width is 1 in.

Solution

From the free-body diagram (see Ex. 7-2, p. 361),

$$\begin{aligned} R_{Az} &= 115.0 \text{ lbf} & R_{Ay} &= 356.7 \text{ lbf} & R_A &= 375 \text{ lbf} \\ R_{Bz} &= 1776.0 \text{ lbf} & R_{By} &= 725.3 \text{ lbf} & R_B &= 1918 \text{ lbf} \end{aligned}$$

At the shaft speed of 389 rev/min, the design life of 12 000 h correlates to a bearing life of $L_D = (12\,000 \text{ h})(60 \text{ min/h})(389 \text{ rev/min}) = 2.8 \times 10^8 \text{ rev}$.

Start with bearing B since it has the higher loads and will likely raise any lurking problems. From Eq. (11-7), p. 558, assuming a ball bearing with $a = 3$ and $L = 2.8 \times 10^6 \text{ rev}$,

$$F_{RB} = 1918 \left[\frac{2.8 \times 10^8 / 10^6}{0.02 + 4.439(1 - 0.99)^{1/1.483}} \right]^{1/3} = 20\,820 \text{ lbf}$$

A check on the Internet for available bearings (www.globalspec.com is one good starting place) shows that this load is relatively high for a ball bearing with bore size in the neighborhood of 1 in. Try a cylindrical roller bearing. Recalculating F_{RB} with the exponent $a = 3/10$ for roller bearings, we obtain

$$F_{RB} = 16\,400 \text{ lbf}$$

Cylindrical roller bearings are available from several sources in this range. A specific one is chosen from SKF, a common supplier of bearings, with the following specifications:

Cylindrical roller bearing at right end of shaft

$C = 18\,658 \text{ lbf}$, ID = 1.181 1 in, OD = 2.834 6 in, $W = 1.063 \text{ in}$

Shoulder diameter = 1.45 in to 1.53 in, and maximum fillet radius = 0.043 in

For bearing *A*, again assuming a ball bearing,

$$F_{RA} = 375 \left[\frac{2.8 \times 10^8 / 10^6}{0.02 + 4.439(1 - 0.99)^{1/1.483}} \right]^{1/3} = 407 \text{ lbf}$$

A specific ball bearing is chosen from the SKF Internet catalog.

Deep-groove ball bearing at left end of shaft

$C = 5058 \text{ lbf}$, $ID = 1.000 \text{ in}$, $OD = 2.500 \text{ in}$, $W = 0.75 \text{ in}$

Shoulder diameter = 1.3 in to 1.4 in, and maximum fillet radius = 0.08 in

At this point, the actual bearing dimensions can be checked against the initial assumptions. For bearing *B* the bore diameter of 1.1811 in is slightly larger than the original 1.0 in. There is no reason for this to be a problem as long as there is room for the shoulder diameter. The original estimate for shoulder support diameters was 1.4 in. As long as this diameter is less than 1.625 in, the next step of the shaft, there should not be any problem. In the case study, the recommended shoulder support diameters are within the acceptable range. The original estimates for stress concentration at the bearing shoulder assumed a fillet radius such that $r/d = 0.02$. The actual bearings selected have ratios of 0.036 and 0.080. This allows the fillet radii to be increased from the original design, decreasing the stress concentration factors.

The bearing widths are close to the original estimates. Slight adjustments should be made to the shaft dimensions to match the bearings. No redesign should be necessary.

18–10 Key and Retaining Ring Selection

The sizing and selection of keys is discussed in Sec. 7–7, p. 376, with an example in Ex. 7–6, p. 382. The cross-sectional size of the key will be dictated to correlate with the shaft size (see Tables 7–6 and 7–8, pp. 379, 381), and must certainly match an integral keyway in the gear bore. The design decision includes the length of the key, and if necessary an upgrade in material choice.

The key could fail by shearing across the key, or by crushing due to bearing stress. For a square key, it turns out that checking only the crushing failure is adequate, since the shearing failure will be less critical according to the distortion energy failure theory, and equal according to the maximum shear stress failure theory. Check Ex. 7–6 to investigate why.

CASE STUDY PART 8 KEY DESIGN

Continue the case study by specifying appropriate keys for the two gears on the intermediate shaft to provide a factor of safety of 2. The gears are to be custom bored and keyed to the required specifications. Previously obtained information includes the following:

Transmitted torque: $T = 3240 \text{ lbf-in}$

Bore diameters: $d_3 = d_4 = 1.625 \text{ in}$

Gear hub lengths: $l_3 = 1.5 \text{ in}$, $l_4 = 2.0 \text{ in}$

Solution

From Table 7-6, p. 379, for a shaft diameter of 1.625 in, choose a square key with side dimension $t = \frac{3}{8}$ in. Choose 1020 CD material, with $S_y = 57$ kpsi. The force on the key at the surface of the shaft is

$$F = \frac{T}{r} = \frac{3240}{1.625/2} = 3988 \text{ lbf}$$

Checking for failure by crushing, we find the area of one-half the face of the key is used.

$$n = \frac{S_y}{\sigma} = \frac{S_y}{F/(tl/2)}$$

Solving for l gives

$$l = \frac{2Fn}{tS_y} = \frac{2(3988)(2)}{(0.375)(57000)} = 0.75 \text{ in}$$

Since both gears have the same bore diameter and transmit the same torque, the same key specification can be used for both.

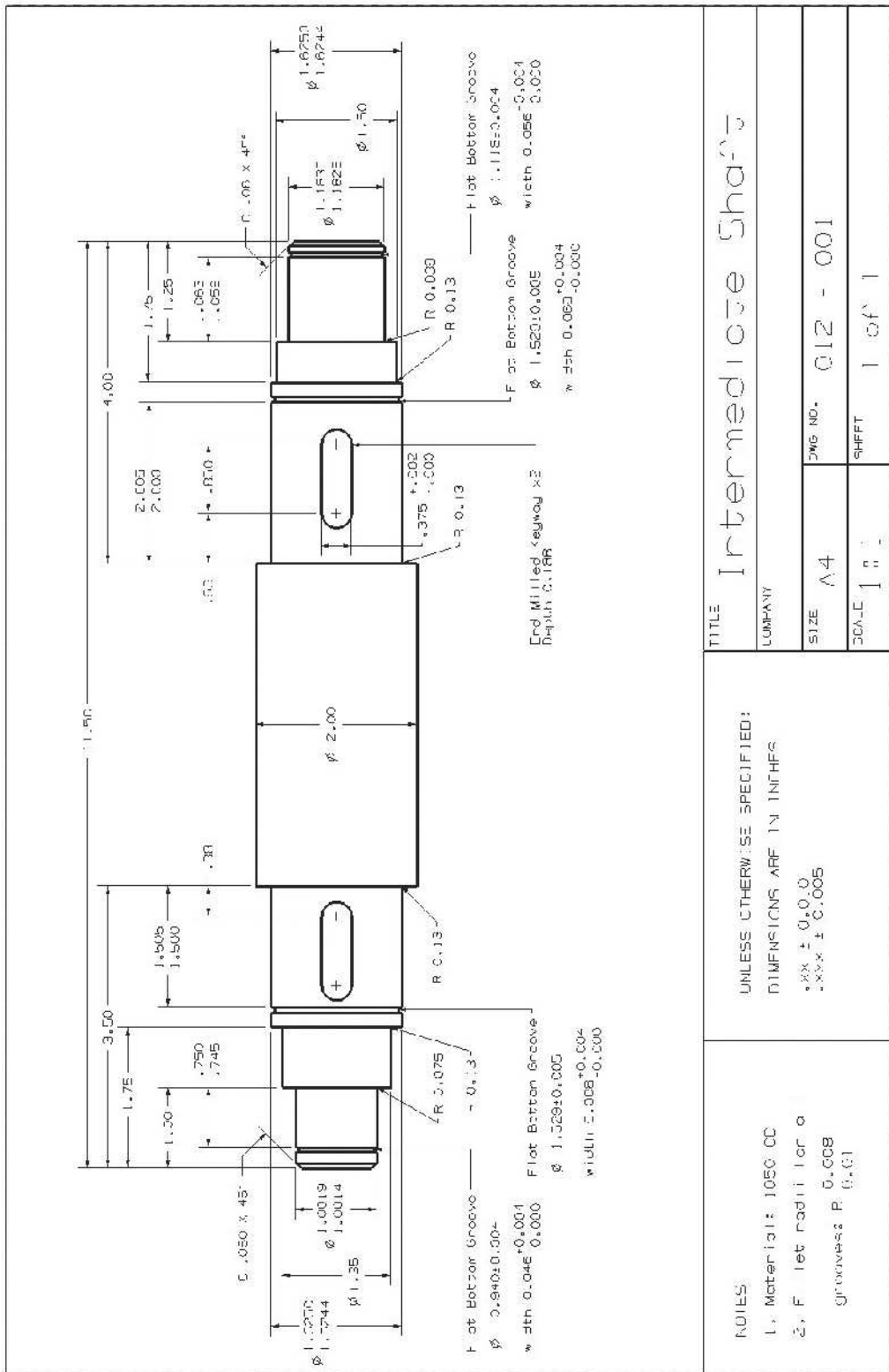
Retaining ring selection is simply a matter of checking catalog specifications. The retaining rings are listed for nominal shaft diameter, and are available with different axial load capacities. Once selected, the designer should make note of the depth of the groove, the width of the groove, and the fillet radius in the bottom of the groove. The catalog specification for the retaining ring also includes an edge margin, which is the minimum distance to the next smaller diameter change. This is to ensure support for the axial load carried by the ring. It is important to check stress concentration factors with actual dimensions, as these factors can be rather large. In the case study, a specific retaining ring was already chosen during the stress analysis (see Ex. 7-2, p. 361) at the potentially critical location of gear 4. The other locations for retaining rings were not at points of high stress, so it is not necessary to worry about the stress concentration due to the retaining rings in these locations. Specific retaining rings should be selected at this time to complete the dimensional specifications of the shaft.

For the case study, retaining rings specifications are entered into globalspec, and specific rings are selected from Truarc Co., with the following specifications:

	Both Gears	Left Bearing	Right Bearing
Nominal Shaft diameter	1.625 in	1.000 in	1.181 in
Groove diameter	1.529 ± 0.005 in	0.940 ± 0.004 in	1.118 ± 0.004 in
Groove width	0.068 ^{+0.004} / _{-0.000} in	0.046 ^{+0.004} / _{-0.000} in	0.046 ^{+0.004} / _{-0.000} in
Nominal groove depth	0.048 in	0.030 in	0.035 in
Max groove fillet radius	0.010 in	0.010 in	0.010 in
Minimum edge margin	0.144 in	0.105 in	0.105 in
Allowable axial thrust	11 850 lbf	6 000 lbf	7 000 lbf

These are within the estimates used for the initial shaft layout, and should not require any redesign. The final shaft should be updated with these dimensions.

Figure 18-3



Intermediate Shaft

TITLE	Intermediate Shaft	
COMPANY		
SIZE	A4	DWG NO. 012 - 001
SCALE	1:1	SHEET 1 of 1

18–12 Final Analysis

At this point in the design, everything seems to check out. Final details include determining dimensions and tolerances for appropriate fits with the gears and bearings. See Section 7–8, p. 383, for details on obtaining specific fits. Any small changes from the nominal diameters already specified will have negligible effect on the stress and deflection analysis. However, for manufacturing and assembly purposes, the designer should not overlook the tolerance specification. Improper fits can lead to failure of the design. The final drawing for the intermediate shaft is shown in Fig. 18–3.

For documentation purposes, and for a check on the design work, the design process should conclude with a complete analysis of the final design. Remember that analysis is much more straightforward than design, so the investment of time for the final analysis will be relatively small.

PROBLEMS

- 18–1 For the case study problem, design the input shaft, including complete specification of the gear, bearings, key, retaining rings, and shaft.
- 18–2 For the case study problem, design the output shaft, including complete specification of the gear, bearings, key, retaining rings, and shaft.
- 18–3 For the case study problem, use helical gears and design the intermediate shaft. Compare your results with the spur gear design presented in this chapter.
- 18–4 Perform a final analysis for the resulting design of the intermediate shaft of the case study problem presented in this chapter. Produce a final drawing with dimensions and tolerances for the shaft. Does the final design satisfy all the requirements? Identify the critical aspects of the design with the lowest factor of safety.
- 18–5 For the case study problem, change the power requirement to 40 horsepower. Design the intermediate shaft, including complete specification of the gears, bearings, keys, retaining rings, and shaft.

PART**4****Analysis Tools**

19

Finite-Element Analysis

Chapter Outline

- 19-1** The Finite-Element Method **935**
- 19-2** Element Geometries **937**
- 19-3** The Finite-Element Solution Process **939**
- 19-4** Mesh Generation **942**
- 19-5** Load Application **944**
- 19-6** Boundary Conditions **945**
- 19-7** Modeling Techniques **946**
- 19-8** Thermal Stresses **949**
- 19-9** Critical Buckling Load **949**
- 19-10** Vibration Analysis **951**
- 19-11** Summary **952**

Mechanical components in the form of simple bars, beams, etc., can be analyzed quite easily by basic methods of mechanics that provide closed-form solutions. Actual components, however, are rarely so simple, and the designer is forced to less effective approximations of closed-form solutions, experimentation, or numerical methods. There are a great many numerical techniques used in engineering applications for which the digital computer is very useful. In mechanical design, where computer-aided design (CAD) software is heavily employed, the analysis method that integrates well with CAD is *finite-element analysis* (FEA). The mathematical theory and applications of the method are vast. There is also a number of commercial FEA software packages that are available, such as ANSYS, NASTRAN, Algor, etc.

The purpose of this chapter is only to expose the reader to some of the fundamental aspects of FEA, and therefore the coverage is extremely introductory in nature. For further detail, the reader is urged to consult the many references cited at the end of this chapter. Figure 19–1 shows a finite-element model of a crankshaft that was developed to study the effects of dynamic elastohydrodynamic lubrication on bearing and structural performance.¹

There are a multitude of FEA applications such as static and dynamic, linear and nonlinear, stress and deflection analysis; free and forced vibrations; heat transfer (which can be combined with stress and deflection analysis to provide thermally induced stresses and deflections); elastic instability (buckling); acoustics; electrostatics and

Figure 19-1

Model of a crankshaft using ANSYS finite-element software. (a) Meshed model (b); stress contours. Courtesy of S. Boedo [see footnote 1].



¹S. Boedo, “Elastohydrodynamic Lubrication of Conformal Bearing Systems,” *Proceedings of 2002 ANSYS Users Conference*, Pittsburgh, PA, April 22–24, 2002.

magnetics (which can be combined with heat transfer); fluid dynamics; piping analysis; and multiphysics. For purposes of this chapter, we will limit ourselves to basic mechanics analyses.

An actual mechanical component is a continuous elastic structure (continuum). FEA divides (discretizes) the structure into small but finite, well-defined, elastic substructures (elements). By using polynomial functions, together with matrix operations, the continuous elastic behavior of each element is developed in terms of the element's material and geometric properties. Loads can be applied within the element (gravity, dynamic, thermal, etc.), on the surface of the element, or at the *nodes* of the element. The element's nodes are the fundamental governing entities of the element, as it is the node where the element connects to other elements, where elastic properties of the element are eventually established, where boundary conditions are assigned, and where forces (contact or body) are ultimately applied. A node possesses *degrees of freedom* (dof's). Degrees of freedom are the independent translational and rotational motions that can exist at a node. At most, a node can possess three translational and three rotational degrees of freedom. Once each element within a structure is defined *locally* in matrix form, the elements are then *globally* assembled (attached) through their common nodes (dof's) into an overall system matrix. Applied loads and boundary conditions are then specified and through matrix operations the values of all unknown displacement degrees of freedom are determined. Once this is done, it is a simple matter to use these displacements to determine strains and stresses through the constitutive equations of elasticity.

19-1 The Finite-Element Method

The modern development of the finite-element method began in the 1940s in the field of structural mechanics with the work of Hrennikoff,² McHenry,³ and Newmark,⁴ who used a lattice of line elements (rods and beams) for the solution of stresses in continuous solids. In 1943, from a 1941 lecture, Courant⁵ suggested piecewise polynomial interpolation over triangular subregions as a method to model torsional problems. With the advent of digital computers in the 1950s it became practical for engineers to write and solve the stiffness equations in matrix form.^{6, 7, 8} A classic paper by Turner, Clough, Martin, and Topp published in 1956 presented the matrix stiffness equations for the

²A. Hrennikoff, "Solution of Problems in Elasticity by the Frame Work Method," *Journal of Applied Mechanics*, Vol. 8, No. 4, pp. 169–175, December 1941.

³D. McHenry, "A Lattice Analogy for the Solution of Plane Stress Problems," *Journal of Institution of Civil Engineers*, Vol. 21, pp. 59–82, December 1943.

⁴N. M. Newmark, "Numerical Methods of Analysis in Bars, Plates, and Elastic Bodies," *Numerical Methods in Analysis in Engineering* (ed. L. E. Grinter), Macmillan, 1949.

⁵R. Courant, "Variational Methods for the Solution of Problems of Equilibrium and Vibrations," *Bulletin of the American Mathematical Society*, Vol. 49, pp. 1–23, 1943.

⁶S. Levy, "Structural Analysis and Influence Coefficients for Delta Wings," *Journal of Aeronautical Sciences*, Vol. 20, No. 7, pp. 449–454, July 1953.

⁷J. H. Argyris, "Energy Theorems and Structural Analysis," *Aircraft Engineering*, October, November, December 1954 and February, March, April, May 1955.

⁸J. H. Argyris and S. Kelsey, *Energy Theorems and Structural Analysis*, Butterworths, London, 1960 (reprinted from *Aircraft Engineering*, 1954–55).

truss, beam, and other elements.⁹ The expression *finite element* is first attributed to Clough.¹⁰ Since these early beginnings, a great deal of effort has been expended in the development of the finite element method in the areas of element formulations and computer implementation of the entire solution process. The major advances in computer technology include the rapidly expanding computer hardware capabilities, efficient and accurate matrix solver routines, and computer graphics for ease in the visual preprocessing stages of model building, including automatic adaptive mesh generation, and in the postprocessing stages of reviewing the solution results. A great abundance of literature has been presented on the subject, including many textbooks. A partial list of some textbooks, introductory and more comprehensive, is given at the end of this chapter.

Since the finite-element method is a numerical technique that discretizes the domain of a continuous structure, errors are inevitable. These errors are:

- 1 **Computational errors.** These are due to round-off errors from the computer floating-point calculations and the formulations of the numerical integration schemes that are employed. Most commercial finite-element codes concentrate on reducing these errors, and consequently the analyst generally is concerned with discretization factors.
- 2 **Discretization errors.** The geometry and the displacement distribution of a true structure continuously vary. Using a finite number of elements to model the structure introduces errors in matching geometry and the displacement distribution due to the inherent mathematical limitations of the elements.

For an example of discretization errors, consider the constant thickness, thin plate structure shown in Fig. 19–2a. Figure 19–2b shows a finite-element model of

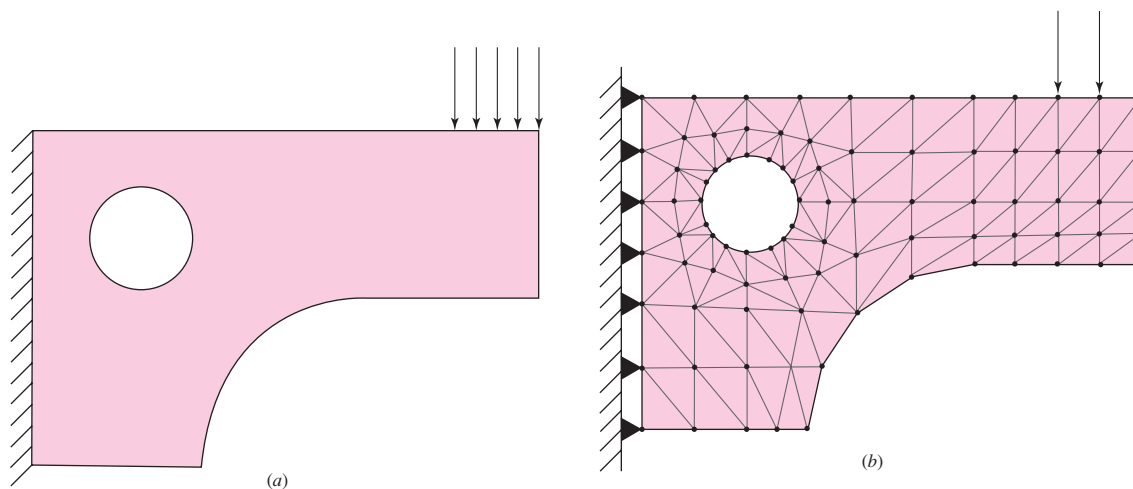


Figure 19-2

Structural problem. (a) Idealized model; (b) finite-element model.

⁹M. J. Turner, R. W. Clough, H. C. Martin, and L. J. Topp, "Stiffness and Deflection Analysis of Complex Structures," *Journal of Aeronautical Sciences*, Vol. 23, No. 9, pp. 805–824, September 1956.

¹⁰R. W. Clough, "The Finite Element Method in Plane Stress Analysis," *Proceedings of the Second Conference on Electronic Computation*, American Society of Civil Engineers, Pittsburgh, PA, pp. 345–378, September 1960.

the structure where three-node, plane stress, simplex triangular elements are employed. This element type has a flaw that creates two basic problems. The element has straight sides that remain straight after deformation. The strains throughout the plane stress triangular element are constant. The first problem, a geometric one, is the modeling of curved edges. Note that the surface of the model with a large curvature appears poorly modeled, whereas the surface of the hole seems to be reasonably modeled. The second problem, which is much more severe, is that the strains in various regions of the actual structure are changing rapidly, and the constant strain element will provide only an approximation of the average strain at the center of the element. So, in a nutshell, the results predicted by this model will be extremely poor. The results can be improved by significantly increasing the number of elements (increased mesh density). Alternatively, using a better element, such as an eight-node quadrilateral, which is more suited to the application, will provide the improved results. Because of higher-order interpolation functions, the eight-node quadrilateral element can model curved edges and provide for a higher-order function for the strain distribution.

In Fig. 19–2*b*, the triangular elements are shaded and the nodes of the elements are represented by the black dots. Forces and constraints can be placed only at the nodes. The nodes of a simplex triangular plane stress elements have only two degrees of freedom, translation in the plane. Thus, the solid black, simple support triangles on the left edge represent the fixed support of the model. Also, the distributed load can be applied only to three nodes as shown. The modeled load has to be statically consistent with the actual load.

19-2 Element Geometries

Many geometric shapes of elements are used in finite-element analysis for specific applications. The various elements used in a general-purpose commercial FEM software code constitute what is referred to as the *element library* of the code. Elements can be placed in the following categories: *line elements*, *surface elements*, *solid elements*, and *special-purpose elements*. Table 19–1 provides some, but not all, of the

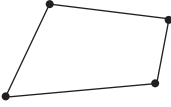
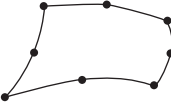
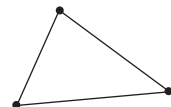
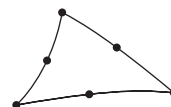
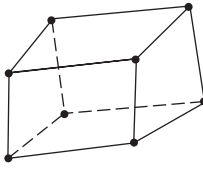
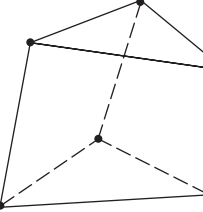
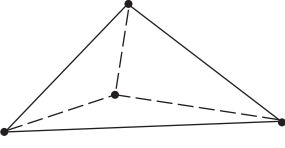



Table 19-1

Sample finite-element library.

Element Type	None	Shape	Number of Nodes	Applications
Line	Truss		2	Pin-ended bar in tension or compression
Line	Beam		2	Bending
Line	Frame		2	Axial, torsional, and bending. With or without load stiffening.

(continued)

| Table 19-1 (Continued)

Element Type	None	Shape	Number of Nodes	Applications
Surface	4-node quadrilateral		4	Plane stress or strain, axisymmetry, shear panel, thin flat plate in bending
	8-node quadrilateral		8	Plane stress or strain, thin plate or shell in bending
	3-node triangular		3	Plane stress or strain, axisymmetry, shear panel, thin flat plate in bending. Prefer quad where possible. Used for transitions of quads.
	6-node Triangular		6	Plane stress or strain, axisymmetry, thin plate or shell in bending. Prefer quad where possible. Used for transitions of quads.
Solid†	8-node hexagonal (brick)		8	Solid, thick plate
	6-node pentagonal (wedge)		6	Solid, thick plate. Used for transitions.
	4-node tetrahedron (tet)		4	Solid, thick plate. Used for transitions.
Gap			2	Free displacement for prescribed compressive gap
Special purpose	Hook		2	Free displacement for prescribed extension gap
	Rigid		Variable	Rigid constraints between nodes

†These elements are also available with midside nodes.

types of elements available for finite-element analysis for structural problems. Not all elements support all degrees of freedom. For example, the 3-D truss element supports only three translational degrees of freedom at each node. Connecting elements with differing dof's generally requires some manual modification. For example, consider connecting a truss element to a frame element. The frame element supports all six dof's at each node. A truss member, when connected to it, can rotate freely at the connection.

19-3 The Finite-Element Solution Process

We will describe the finite-element solution process on a very simple one-dimensional problem, using the linear truss element. A truss element is a bar loaded in tension or compression and is of constant cross-sectional area A , length l , and elastic modulus E . The basic truss element has two nodes, and for a one-dimensional problem, each node will have only one degree of freedom. A truss element can be modeled as a simple linear spring with a spring rate, given by Eq. (4-4) as

$$k = \frac{AE}{l} \tag{19-1}$$

Consider a spring element (e) of spring rate k_e , with nodes i and j , as shown in Fig. 19-3. Nodes and elements will be numbered. So, to avoid confusion as to what a number corresponds to, elements will be numbered within parentheses. Assuming all forces f and displacements u directed toward the right as positive, the forces at each node can be written as

$$\begin{aligned} f_{i,e} &= k_e (u_i - u_j) = k_e u_i - k_e u_j \\ f_{j,e} &= k_e (u_j - u_i) = -k_e u_i + k_e u_j \end{aligned} \tag{19-2}$$

The two equations can be written in matrix form as

$$\begin{Bmatrix} f_{i,e} \\ f_{j,e} \end{Bmatrix} = \begin{bmatrix} k_e & -k_e \\ -k_e & k_e \end{bmatrix} \begin{Bmatrix} u_i \\ u_j \end{Bmatrix} \tag{19-3}$$

Next, consider a two-spring system as shown in Fig. 19-4a. Here we have numbered the nodes and elements. We have also labeled the forces at each node. However, these forces are the total external forces at each node, F_1 , F_2 , and F_3 . If we draw separate free-body diagrams we will expose the internal forces as shown in Fig. 19-4b.

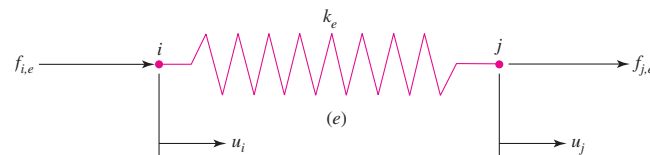
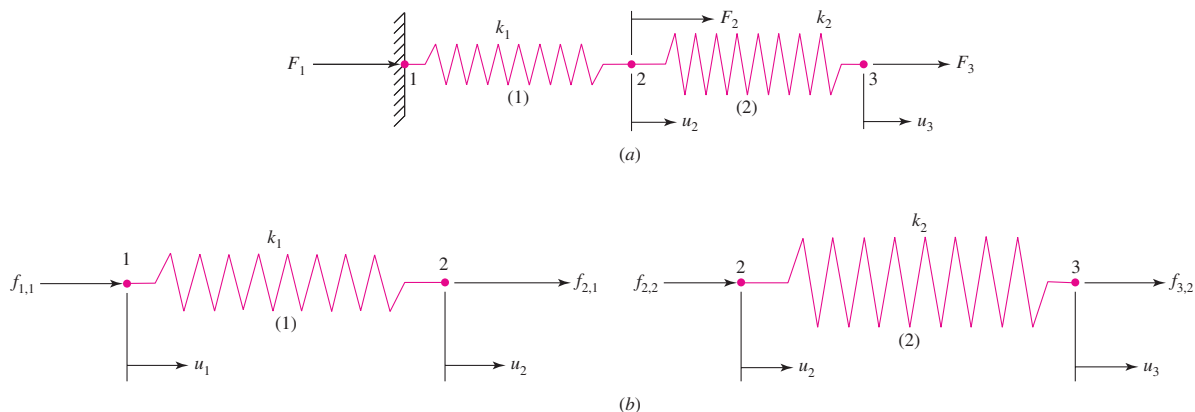


Figure 19-3

A simple spring element.

**Figure 19-4**

A two-element spring system. (a) System model, (b) separate free-body diagrams.

Using Eq. (19-3) for each spring gives

$$\text{Element 1} \quad \begin{Bmatrix} f_{1,1} \\ f_{2,1} \end{Bmatrix} = \begin{bmatrix} k_1 & -k_1 \\ -k_1 & k_1 \end{bmatrix} \begin{Bmatrix} u_1 \\ u_2 \end{Bmatrix} \quad (19-4a)$$

$$\text{Element 2} \quad \begin{Bmatrix} f_{2,2} \\ f_{3,2} \end{Bmatrix} = \begin{bmatrix} k_2 & -k_2 \\ -k_2 & k_2 \end{bmatrix} \begin{Bmatrix} u_2 \\ u_3 \end{Bmatrix} \quad (19-4b)$$

The total force at each node is the external force, $F_1 = f_{1,1}$, $F_2 = f_{2,1} + f_{2,2}$, and $F_3 = f_{3,2}$. Combining the two matrices in terms of the external forces gives

$$\begin{Bmatrix} f_{1,1} \\ f_{2,1} + f_{2,2} \\ f_{3,2} \end{Bmatrix} = \begin{Bmatrix} F_1 \\ F_2 \\ F_3 \end{Bmatrix} = \begin{bmatrix} k_1 & -k_1 & 0 \\ -k_1 & (k_1 + k_2) & -k_2 \\ 0 & -k_2 & k_2 \end{bmatrix} \begin{Bmatrix} u_1 \\ u_2 \\ u_3 \end{Bmatrix} \quad (19-5)$$

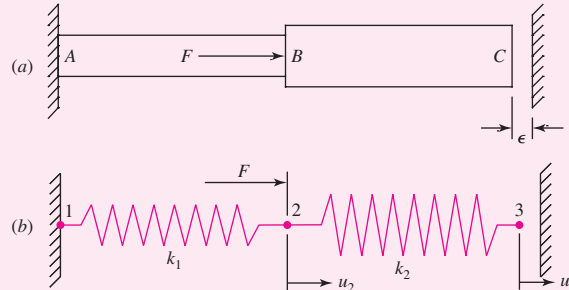
If we know the displacement of a node, then the force at the node will be unknown. For example, in Fig. 19-4a, the displacement of node 1 at the wall is zero, so F_1 is the unknown reaction force (note, up to this point, we have not applied a static solution of the system). If we do not know the displacement of a node, then we know the force. For example, in Fig. 19-4a, the displacements at nodes 2 and 3 are unknown, and the forces F_2 and F_3 are to be specified. To see how the remainder of the solution process can be implemented, let us consider the following example.

EXAMPLE 19-1

Consider the aluminum step-shaft shown in Fig. 19-5a. The areas of sections AB and BC are 0.100 in^2 and 0.150 in^2 , respectively. The lengths of sections AB and BC are 10 in and 12 in, respectively. A force $F = 1000 \text{ lbf}$ is applied to B . Initially, a gap of $\epsilon = 0.002 \text{ in}$ exists between end C and the right rigid wall. Determine the wall

Figure 19-5

(a) Step shaft; (b) spring model.



reactions, the internal forces in the members, and the deflection of point B . Let $E = 10$ Mpsi and assume that end C hits the wall. Check the validity of the assumption.

Solution The step-shaft is modeled by the two-spring system of Fig. 19-5*b* where

$$k_1 = \left(\frac{AE}{l} \right)_{AB} = \frac{0.1(10)10^6}{10} = 1(10^5) \text{ lbf/in}$$

$$k_2 = \left(\frac{AE}{l} \right)_{BC} = \frac{0.15(10)10^6}{12} = 1.25(10^5) \text{ lbf/in}$$

With $u_1 = 0$, $F_2 = 1000$ lbf and the assumption that $u_3 = \epsilon = 0.002$ in, Eq. (19.5) becomes

$$\begin{Bmatrix} F_1 \\ 1000 \\ F_3 \end{Bmatrix} = 10^5 \begin{Bmatrix} 1 & -1 & 0 \\ -1 & 2.25 & -1.25 \\ 0 & -1.25 & 1.25 \end{Bmatrix} \begin{Bmatrix} 0 \\ u_2 \\ 0.002 \end{Bmatrix} \quad (1)$$

For large problems, there is a systematic method of solving equations like Eq. (1), called *partitioning* or the *elimination approach*.¹¹ However, for this simple problem, the solution is quite simple. From the second equation of the matrix equation

$$1000 = 10^5[-1(0) + 2.25u_2 - 1.25(0.002)]$$

or,

$$\text{Answer} \quad u_B = u_2 = \frac{1000/10^5 + 1.25(0.002)}{2.25} = 5.556(10^{-3}) \text{ in}$$

Since $u_B > \epsilon$, it is verified that point C hits the wall.

The reactions at the walls are F_1 and F_3 . From the first and third equations of matrix Eq. (1),

$$\text{Answer} \quad F_1 = 10^5[-1(u_2)] = 10^5[-1(5.556)10^{-3}] = -555.6 \text{ lbf}$$

¹¹See T. R. Chandrupatla and A. D. Belegundu, *Introduction to Finite Elements in Engineering*, 3rd ed., Prentice Hall, Upper Saddle River, NJ, 2002, pp. 63–68.

and

Answer

$$\begin{aligned} F_3 &= 10^5[-1.25u_2 + 1.25(0.002)] \\ &= 10^5[-1.25(5.556)10^{-3} + 1.25(0.002)] = -444.4 \text{ lbf} \end{aligned}$$

Since F_3 is negative, this also verifies that C hits the wall. Note that $F_1 + F_3 = -555.6 - 444.4 = -1000$ lbf, balancing the applied force (with no statics equations necessary).

For internal forces, it is necessary to return to the individual (local) equations. From Eq. (19-4a),

$$\begin{Bmatrix} f_{1,1} \\ f_{2,1} \end{Bmatrix} = \begin{bmatrix} k_1 & -k_1 \\ -k_1 & k_1 \end{bmatrix} \begin{Bmatrix} u_1 \\ u_2 \end{Bmatrix} = 10^5 \begin{bmatrix} 1 & -1 \\ -1 & 1 \end{bmatrix} \begin{Bmatrix} 0 \\ 5.556(10^{-3}) \end{Bmatrix} = \begin{Bmatrix} -555.6 \\ 555.6 \end{Bmatrix} \text{ lbf}$$

Answer

Since $f_{1,1}$ is directed to the left and $f_{2,1}$ is directed to the right, the element is in tension, with a force of 555.6 lbf. If the stress is desired, it is simply $\sigma_{AB} = f_{2,1}/A_{AB} = 555.6/0.1 = 5556$ psi.

For element BC, from Eq. (19.4b),

$$\begin{Bmatrix} f_{2,2} \\ f_{3,2} \end{Bmatrix} = \begin{bmatrix} k_2 & -k_2 \\ -k_2 & k_2 \end{bmatrix} \begin{Bmatrix} u_2 \\ u_3 \end{Bmatrix} = 10^5 \begin{bmatrix} 1.25 & -1.25 \\ -1.25 & 1.25 \end{bmatrix} \begin{Bmatrix} 5.556(10^{-3}) \\ 0.002 \end{Bmatrix} = \begin{Bmatrix} 444.5 \\ -444.5 \end{Bmatrix} \text{ lbf}$$

Answer

Since $f_{2,2}$ is directed to the right and $f_{3,2}$ is directed to the left, the element is in compression, with a force of 444.5 lbf. If the stress is desired, it is simply $\sigma_{BC} = -f_{2,2}/A_{BC} = -444.5/0.15 = -2963$ psi.

19-4 Mesh Generation

The network of elements and nodes that discretize a region is referred to as a *mesh*. The *mesh density* increases as more elements are placed within a given region. *Mesh refinement* is when the mesh is modified from one analysis of a model to the next analysis to yield improved results. Results generally improve when the mesh density is increased in areas of high stress gradients and/or when geometric transition zones are meshed smoothly. Generally, but not always, the FEA results converge toward the exact results as the mesh is continuously refined. To assess improvement, in regions where high stress gradients appear, the structure can be remeshed with a higher mesh density at this location. If there is a minimal change in the maximum stress value, it is reasonable to presume that the solution has converged. There are three basic ways to generate an element mesh, manually, semiautomatically, or fully automated.

- 1 Manual mesh generation.** This is how the element mesh was created in the early days of the finite-element method. This is a very labor intensive method of creating the mesh, and except for some quick modifications of a model it is rarely done. *Note:* care must be exercised in editing an input text file. With

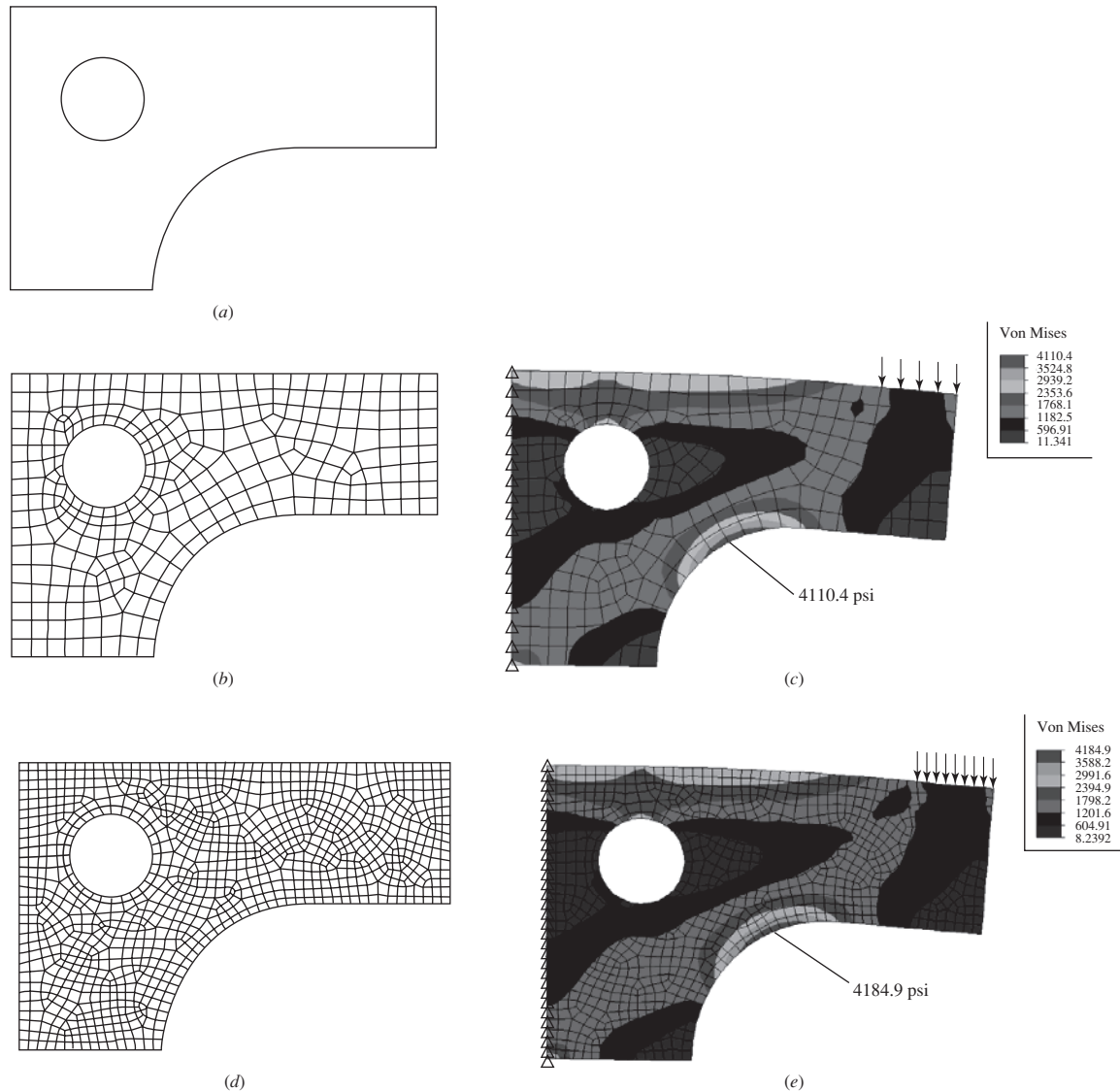
some FEA software, other files such as the preprocessor binary graphics file may not change. Consequently, the files may no longer be compatible with each other.

- 2 Semiautomatic mesh generation.** Over the years, computer algorithms have been developed that enable the modeler to automatically mesh regions of the structure that he or she has divided up, using well-defined boundaries. Since the modeler has to define these regions, the technique is deemed *semiautomatic*. The development of the many computer algorithms for mesh generation emanates from the field of computer graphics. If the reader desires more information on this subject, a review the literature available from this field is recommended.
- 3 Fully automated mesh generation.** Many software vendors have concentrated their efforts on developing fully automatic mesh generation, and in some instances, automatic *self-adaptive* mesh refinement. The obvious goal is to significantly reduce the modeler's preprocessing time and effort to arrive at a final well-constructed FEA mesh. Once the complete boundary of the structure is defined, without subdivisions as in semiautomatic mesh generation and with a minimum of user intervention, various schemes are available to discretize the region with *one element type*. For plane elastic problems the boundary is defined by a series of internal and external geometric lines and the element type to be automeshed would be the plane elastic element. For thin-walled structures, the geometry would be defined by three-dimensional surface representations and the automeshed element type would be the three-dimensional plate element. For solid structures, the boundary could be constructed by using *constructive solid geometry (CSG)* or *boundary representation (B-rep)* techniques. The finite-element types for automeshing would be the brick and/or tetrahedron.

Automatic self-adaptive mesh refinement programs estimate the error of the FEA solution. On the basis of the error, the mesh is automatically revised and reanalyzed. The process is repeated until some convergence or termination criterion is satisfied.

Returning to the thin-plate model of Fig. 19–2, the boundaries of the structure are constructed as shown in Fig. 19–6*a*. The boundaries were then automeshed as shown in Fig. 19–6*b*, where 294 elements and 344 nodes were generated. Note the uniformity of the element generation at the boundaries. The finite-element solver then generated the deflections and von Mises stresses shown in Fig. 19–6*c*. The maximum von Mises stress at the location shown is 4110.4 psi. The model was then automeshed with an increased mesh density as shown in Fig. 19–6*d*, where the model has 1008 elements and 1096 nodes. The results are shown in Fig. 19–6*e* where the maximum von Mises stress is found to be 4184.9 psi, which is only 1.8 percent higher. In all likelihood, the solution has nearly converged. *Note:* The stress contours of Figs. 19–6*c* and *e* are better visualized in color.

When stress concentrations are present, it is necessary to have a very fine mesh at the stress concentration region in order to get realistic results. What is important is that the mesh density needs to be increased only in the region around the stress concentration and that the transition mesh from the rest of the structure to the stress concentration region be gradual. An abrupt mesh transition, in itself, will have the same effect as a stress concentration. Stress concentration will be discussed further in Sec. 19–7, Modeling Techniques.

**Figure 19-6**

Automatic meshing the thin-plate model of Fig. 19-2. (a) Model boundaries; (b) automesh with 294 elements and 344 nodes; (c) deflected (exaggerated scale) with stress contours; (d) automesh with 1008 elements and 1096 nodes, (e) deflected (exaggerated scale) with stress contours.

19-5 Load Application

There are two basic forms of specifying loads on a structure, nodal and element loading. However, element loads are eventually applied to the nodes by using equivalent nodal loads. One aspect of load application is related to Saint-Venant's principle. If one is not concerned about the stresses near points of load application, it is

not necessary to attempt to distribute the loading very precisely. The net force and/or moment can be applied to a single node, provided the element supports the dof associated with the force and/or moment at the node. However, the analyst should not be surprised, or concerned, when reviewing the results and the stresses in the vicinity of the load application point are found to be very large. Concentrated moments can be applied to the nodes of beam and most plate elements. However, concentrated moments cannot be applied to truss, two-dimensional plane elastic, axisymmetric, or brick elements. They do not support rotational degrees of freedom. A pure moment can be applied to these elements only by using forces in the form of a couple. From the mechanics of statics, a couple can be generated by using two or more forces acting in a plane where the net force from the forces is zero. The net moment from the forces is a vector perpendicular to the plane and is the summation of the moments from the forces taken about any common point.

Element loads include static loads due to gravity (weight), thermal effects, surface loads such as uniform and hydrostatic pressure, and dynamic loads due to constant acceleration and steady-state rotation (centrifugal acceleration). As stated earlier, element loads are converted by the software to equivalent nodal loads and in the end are treated as concentrated loads applied to nodes.

For gravity loading, the gravity constant in appropriate units and the direction of gravity must be supplied by the modeler. If the model length and force units are inches and lbf, $g = 386.1 \text{ ips}^2$. If the model length and force units are meters and Newtons, $g = 9.81 \text{ m/s}^2$. The gravity direction is normally toward the center of the earth.

For thermal loading, the thermal expansion coefficient α must be given for each material, as well as the initial temperature of the structure, and the final nodal temperatures. Most software packages have the capability of first performing a finite-element heat transfer analysis on the structure to determine the final nodal temperatures. The temperature results are written to a file, which can be transferred to the static stress analysis. Here the heat transfer model should have the same nodes and element type the static stress analysis model has.

Surface loading can generally be applied to most elements. For example, uniform or linear transverse line loads (force/length) can be specified on beams. Uniform and linear pressure can normally be applied on the edges of two-dimensional plane and axisymmetric elements. Lateral pressure can be applied on plate elements, and pressure can be applied on the surface of solid brick elements. Each software package has its unique manner in which to specify these surface loads, usually in a combination of text and graphic modes.

19-6 Boundary Conditions

The simulation of boundary conditions and other forms of constraint is probably the single most difficult part of the accurate modeling of a structure for a finite-element analysis. In specifying constraints, it is relatively easy to make mistakes of omission or misrepresentation. It may be necessary for the analyst to test different approaches to model esoteric constraints such as bolted joints, welds, etc., which are not as simple as the idealized pinned or fixed joints. Testing should be confined to simple problems and not to a large, complex structure. Sometimes, when the exact nature of a boundary condition is uncertain, only limits of behavior may be possible. For example, we have modeled shafts with bearings as being simply supported. It is more likely that the support is something between simply supported and

fixed, and we could analyze both constraints to establish the limits. However, by assuming simply supported, the results of the solution are conservative for stress and deflections. That is, the solution would predict stresses and deflections larger than the actual.

For another example, consider beam 16 in Table A-9. The horizontal beam is uniformly loaded and is fixed at both ends. Although not explicitly stated, tables such as these assume that the beams are not restrained in the horizontal direction. That is, it is assumed that the beam can slide horizontally in the supports. If the ends were completely or partially restrained, a beam-column solution would be necessary.¹² With a finite-element analysis, a special element, a beam with stiffening, could be used.

Multipoint constraint equations are quite often used to model boundary conditions or rigid connections between elastic members. When used in the latter form, the equations are acting as elements and are thus referred to as *rigid elements*. Rigid elements can rotate or translate only rigidly.

Boundary elements are used to force specific nonzero displacements on a structure. Boundary elements can also be useful in modeling boundary conditions that are askew from the global coordinate system.

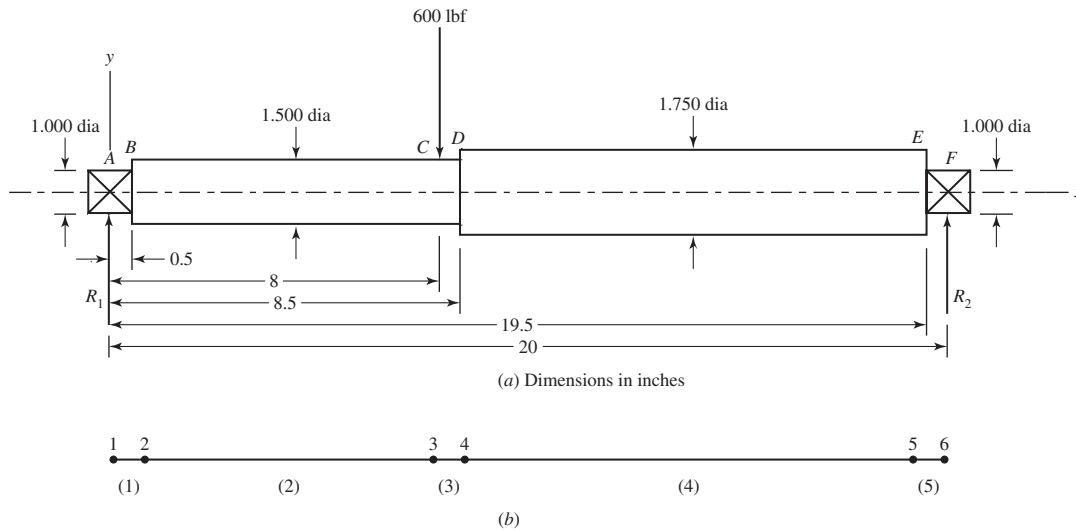
19-7 Modeling Techniques

With today's CAD packages and automatic mesh generators, it is an easy task to create a solid model and mesh the volume with finite elements. With today's computing speeds and with gobs of computer memory, it is very easy to create a model with extremely large numbers of elements and nodes. The finite-element modeling techniques of the past now seem passé and unnecessary. However, much unnecessary time can be spent on a very complex model when a much simpler model will do. The complex model may not even provide an accurate solution, whereas a simpler one will. What is important is what solution the analyst is looking for: deflections, stresses, or both?

For example, consider the steel step-shaft of Ex. 4-7, repeated here as Fig. 19-7a. Let the fillets at the steps have a radius of 0.02 in. If only deflections and slopes were sought at the steps, a highly meshed solid model would not yield much more than the simple five-element beam model, shown in Fig. 19-7b, would. The fillets at the steps, which could not be modeled easily with beam elements, would not contribute much to a difference in results between the two models. Nodes are necessary wherever boundary conditions, applied forces, and changes in cross section and/or material occur. The displacement results for the FEA model are shown in Fig. 19-7c.

The FE model of Fig. 19-7b is not capable of providing the stress at the fillet of the step at D . Here, a full-blown solid model would have to be developed and meshed, using solid elements with a high mesh density at the fillet as shown in Fig. 19-8a. Here, the steps at the bearing supports are not modeled, as we are concerned only with the stress concentration at $x = 8.5$ in. The brick and tetrahedron elements do not support rotational

¹²See R. B. Budynas, *Advanced Strength and Applied Stress Analysis*, 2nd ed., McGraw-Hill, New York, 1999, pp. 471–482.



Displacements/rotations (degrees) of nodes

NODE no.	x translation	y translation	z translation	θ_x rotation (deg)	θ_y rotation (deg)	θ_z rotation (deg)
1	0.0000 e+00	0.0000 e+00	0.0000 e+00	0.0000 e+00	0.0000 e+00	-9.7930 e-02
2	0.0000 e+00	-8.4951 e-04	0.0000 e+00	0.0000 e+00	0.0000 e+00	-9.6179 e-02
3	0.0000 e+00	-9.3649 e-03	0.0000 e+00	0.0000 e+00	0.0000 e+00	-7.9874 e-03
4	0.0000 e+00	-9.3870 e-03	0.0000 e+00	0.0000 e+00	0.0000 e+00	2.8492 e-03
5	0.0000 e+00	-6.0507 e-04	0.0000 e+00	0.0000 e+00	0.0000 e+00	6.8558 e-02
6	0.0000 e+00	0.0000 e+00	0.0000 e+00	0.0000 e+00	0.0000 e+00	6.9725 e-02

(c)

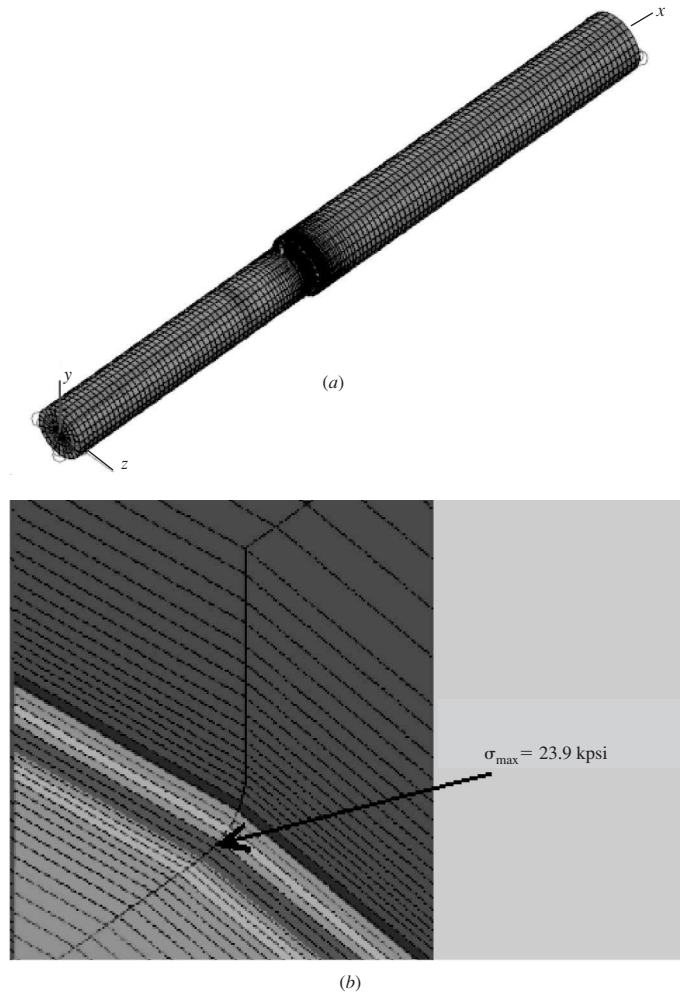
Figure 19-7

(a) Steel step shaft of Ex. 4-7; (b) finite-element model using five beam elements; (c) displacement results for FEA model.

degrees of freedom. To model the simply supported boundary condition at the left end, nodes along the z axis were constrained from translating in the x and y directions. Nodes along the y axis were constrained from translating in the z direction. Nodes on the right end on an axis parallel with the z axis through the center of the shaft were constrained from translating in the y direction, and nodes on an axis parallel with the y axis through the center of the shaft were constrained from translating in the z direction. This ensures no rigid-body translation or rotation and no overconstraint at the ends. The maximum tensile stress at the fillet at the beam bottom is found to be $\sigma_{\max} = 23.9$ kpsi. Performing an analytical check at the step yields $D/d = 1.75/1.5 = 1.167$, and $r/d = 0.02/1.5 = 0.0133$. Figure A-15-9 is not very accurate for these values.

Figure 19-8

(a) Solid model of the step shaft of Ex. 4-7 using 56 384 brick and tetrahedron elements; (b) view of stress contours at step, rotated 180° about x axis, showing maximum tension.



Resorting to another source,¹³ the stress concentration factor is found to be $K_t = 3.00$. The reaction at the right support is $R_F = (8/20)600 = 240$ lbf. The bending moment at the start of the fillet is $M = 240(11.52) = 2765$ lbf · in = 2.765 kip · in. The analytical prediction of the maximum stress is thus

$$\sigma_{\max} = K_t \left(\frac{32M}{\pi d^3} \right) = 3.00 \left[\frac{32(2.765)}{\pi(1.5^3)} \right] = 25.03 \text{ kpsi}$$

The finite-element model is 4.5 percent lower. If more elements were used in the fillet region, the results would undoubtedly be closer. However, the results are within engineering acceptability.

If we want to check deflections, we should compare the results with the three-element beam model, not the five-element model. This is because we did not model the bearing steps in the solid model. The vertical deflection, at $x = 8.5$ in, for the solid

¹³See, W. D. Pilkey, *Peterson's Stress Concentration Factors*, 2nd ed. John Wiley & Sons, New York, 1997, Chart 3.11.

model was found to be -0.00981 in. This is 4.6 percent higher in magnitude than the -0.00938 in deflection for the three-element beam model. For slopes, the brick element does not support rotational degrees of freedom, so the rotation at the ends has to be computed from the displacements of adjacent nodes at the ends. This results in the slopes at the ends of $\theta_A = -0.103^\circ$ and $\theta_F = 0.0732^\circ$; these are 6.7 and 6.6 percent higher in magnitude than the three-element beam model, respectively. However, the point of this exercise is, if deflections were the only result desired, which model would you use?

There are countless modeling situations which could be examined. The reader is urged to read the literature, and peruse the tutorials available from the software vendors.¹⁴

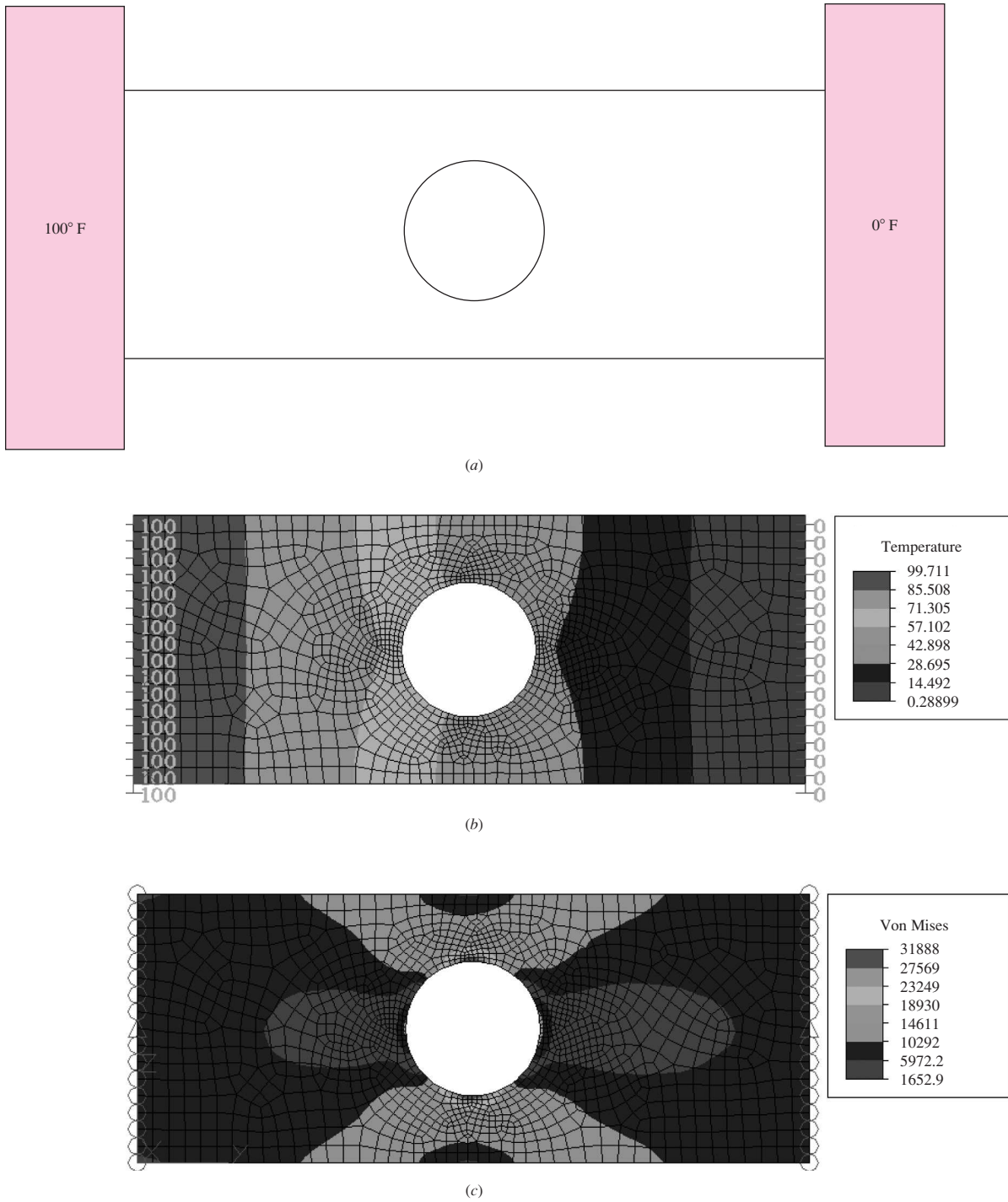
19-8 Thermal Stresses

A heat transfer analysis can be performed on a structural component including the effects of heat conduction, convection, and/or radiation. After the heat transfer analysis is completed, the same model can be used to determine the resulting thermal stresses. For sake of a simple illustration, we will model a $10\text{ in} \times 4\text{ in}$, 0.25-in-thick steel plate with a centered 1.0-in-diameter hole. The plate is supported as shown in Fig. 19-9a, and the temperatures of the ends are maintained at temperatures of 100°F and 0°F . Other than at the walls, all surfaces are thermally insulated. Before placing the plate between the walls, the initial temperature of the plate was 0°F . The thermal coefficient of expansion for steel is $\alpha_s = 6.5 \times 10^{-6} \text{ }^\circ\text{F}^{-1}$. The plate was meshed with 1312 two-dimensional elements, with the mesh refined along the border of the hole. Figure 19-9b shows the temperature contours of the steady-state temperature distribution obtained by the FEA. Using the same elements for a linear stress analysis, where the temperatures were transferred from the heat transfer analysis, Fig. 19-9c shows the resulting stress contours. As expected, the maximum compressive stresses occurred at the top and bottom of the hole; with a magnitude of 31.9 kpsi.

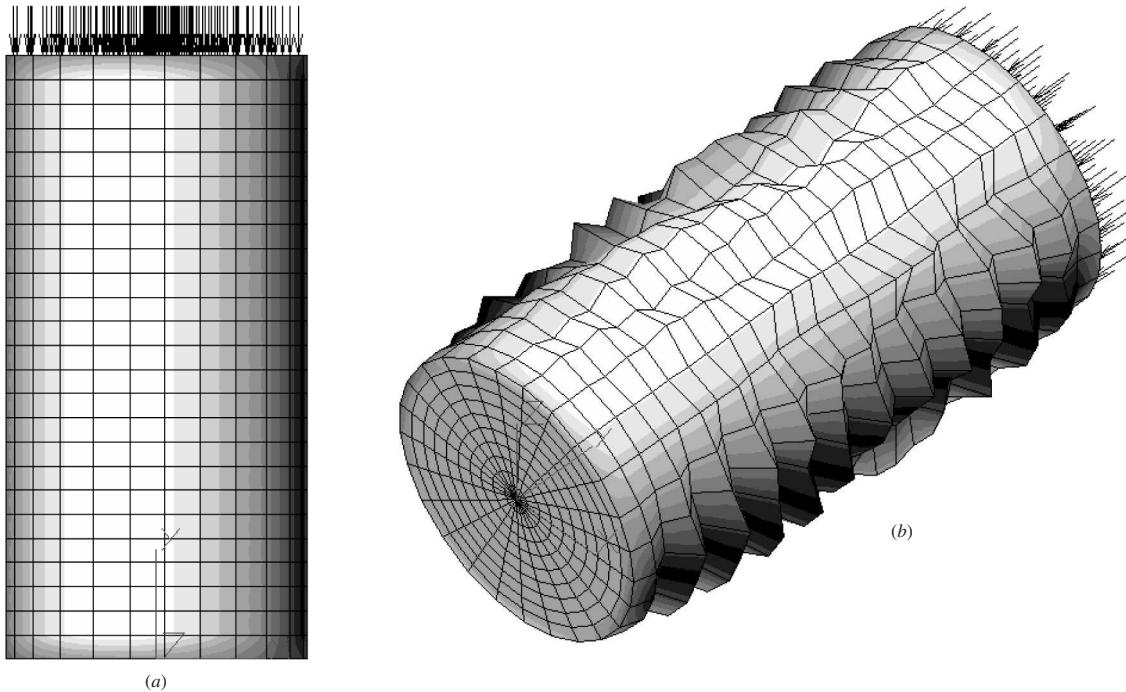
19-9 Critical Buckling Load

Finite elements can be used to predict the *critical buckling load* for a thin-walled structure. An example was shown in Fig. 4-25 (p. 182). Another example can be seen in Fig. 19-10a, which is a thin-walled aluminum beverage can. A specific pressure was applied to the top surface. The bottom of the can was constrained in translation vertically, the center node of the bottom of the can was constrained in translation in all three directions, and one outer node on the can bottom was constrained in translation tangentially. This prevents rigid-body motion, and provides vertical support for the bottom of the can with unconstrained motion of the bottom of the can horizontally. The finite element software returns a value of the load multiplier, which, when multiplied with the total applied force, indicates the critical buckling load. Buckling analysis is an eigenvalue problem, and a reader who reviews a basic mechanics of materials

¹⁴See, for example, R. D. Cook, *Finite Element Modeling for Stress Analysis*, Wiley & Sons, New York, 1995; and R. G. Budynas, *Advanced Strength and Applied Stress Analysis*, 2nd ed., McGraw-Hill, New York, 1999, Chap. 10.


Figure 19-9

(a) Plate supported at ends and maintained at the temperatures shown; (b) steady-state temperature contours; (c) thermal stress contours where the initial temperature of the plate was 0°F.

**Figure 19-10**

(a) Thin-walled aluminum beverage container loaded vertically downward on the top surface; (b) isometric view of the buckled can (deflections greatly exaggerated).

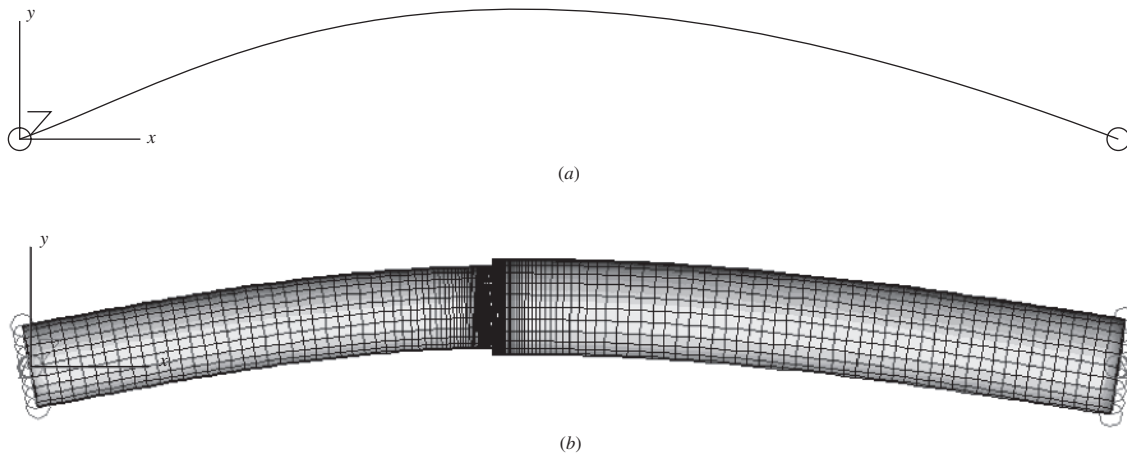
textbook would find there is a deflection mode shape associated with the critical load. The buckling mode shape for the buckled beverage can is shown in Fig. 19-10b.

19-10 Vibration Analysis

The design engineer may be concerned as to how a component behaves relative to dynamic input, which results in vibration. For vibration, most finite element packages start with a *modal analysis* of the component. This provides the natural frequencies and mode shapes that the component naturally vibrates at. These are called the eigenvalues and eigenvectors of the component. Next, this solution can be transferred (much the same as for thermal stresses) to solvers for forced vibration analyses, such as frequency response, transient impact, or random vibration, to see how the component's modes behave to dynamic input. The mode shape analysis is primarily based on stiffness and the resulting deflections. Thus, similar to static stress analysis, simpler models will suffice. However, if, when solving forced response problems, stresses are desired, a more detailed model is necessary (similar to the shaft illustration given in Sec. 19-7).

A modal analysis of the beam model without the bearing steps was performed for a 20-element beam model,¹⁵ and the 56 384-element brick and tetrahedron model.

¹⁵For static deflection analysis, only three beam elements were necessary. However, because of mass distribution for the dynamics problem, more beam elements are necessary.

**Figure 19-11**

First free vibration mode of step beam. (a) Twenty-element beam model, $f_1 = 322$ Hz; (b) 56 384-element brick and tetrahedron model, $f_1 = 316$ Hz.

Needless to say, the beam model took less than 9 seconds to solve, whereas the solid model took *considerably* longer. The first (fundamental) vibration mode was bending and is shown in Fig. 19–11 for both models, together with the respective frequencies. The difference between the frequencies is about 1.9 percent. Further note that the mode shape is just that, a shape. The actual magnitudes of the deflections are unknown, only their relative values are known. Thus, any scale factor can be used to exaggerate the view of the deflection shape.

The convergence of the 20-element model was checked by doubling the number of elements. This resulted in no change.

Figure 19–12 provides the frequencies and shapes for the second mode.¹⁶ Here, the difference between the models is 3.6 percent.

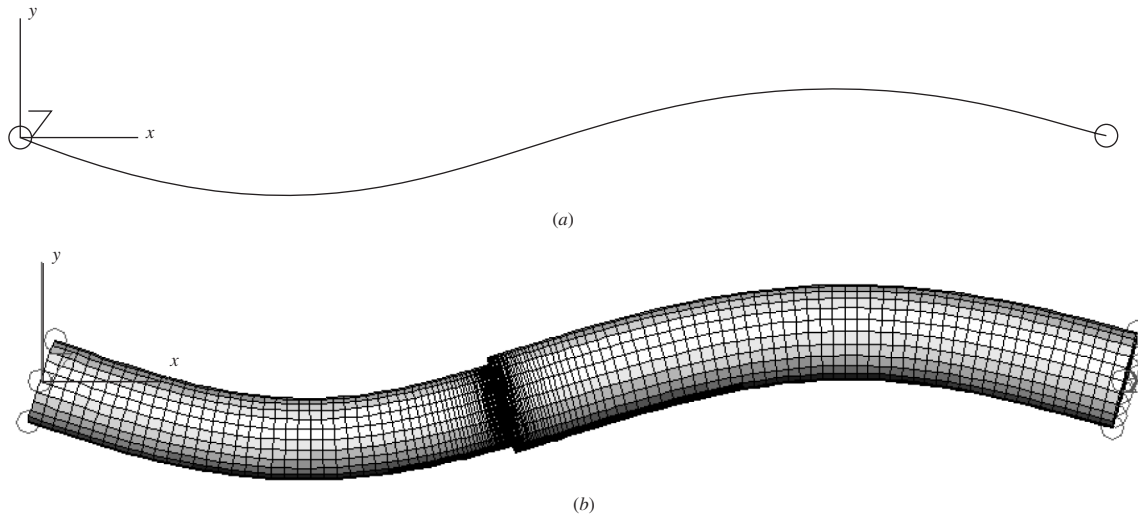
As stated earlier, once the mode shapes are obtained, the response of the structure to various dynamic loadings, such as harmonic, transient, or random input, can be obtained. This is accomplished by using the mode shapes together with modal superposition. The method is called *modal analysis*.¹⁷

19–11 Summary

As stated in Sec. 1–4, the mechanical design engineer has many powerful computational tools available today. Finite-element analysis is one of the most important and is easily integrated into the computer-aided engineering environment. Solid-modeling

¹⁶Note: Both models exhibited repeated frequencies and mode shapes for each bending mode. Since the beam and the bearing supports (boundary conditions) are axisymmetric, the bending modes are the same in all transverse planes. So, the second mode shown in Fig. 19–12 is the next unrepeated mode.

¹⁷See S. S. Rao, *Mechanical Vibrations*, 4th ed., Pearson Prentice Hall, Upper Saddle River, NJ, 2004, Sec. 6.14.

**Figure 19-12**

Second free-vibration mode of step beam. (a) Twenty-element beam model, $f_2 = 1296$ Hz; (b) 56 384-element brick and tetrahedron model, $f_2 = 1249$ Hz.

CAD software provides an excellent platform for the easy creation of FEA models. Several types of analysis have been described in this chapter, using some fairly simple illustrative problems. The purpose of this chapter, however, was to discuss some basic considerations of FEA element configurations, parameters, modeling considerations, and solvers, and not to necessarily describe complex geometric situations. Finite-element theory and applications is a vast subject, and will take years of experience before one becomes knowledgeable and skilled with the technique. There are many sources of information on the topic in various textbooks; FEA software suppliers (such as ANSYS, MSC/NASTRAN, and Algor) provide case studies, user's guides, user's group newsletters, tutorials, etc.; and the Internet provides many sources. Footnotes 11, 12, and 14 referenced some textbooks on FEA. Additional references are cited below.

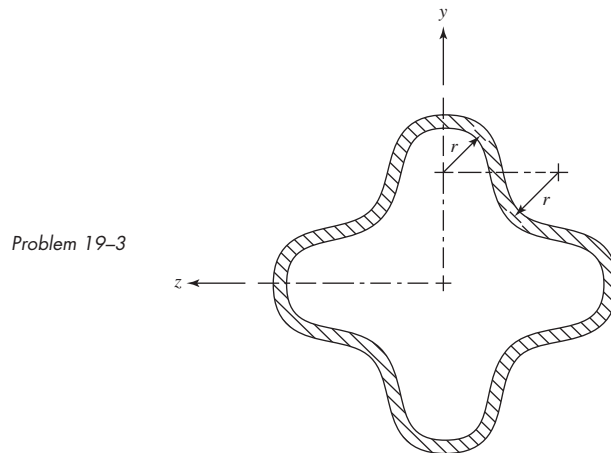
Additional FEA References

- R. D. Cook, D. S. Malkus, M. E. Plesha, and R. J. Witt, *Concepts and Applications of Finite Element Analysis*, 4th ed., Wiley, New York, 2001.
- D. L. Logan, *A First Course in the Finite Element Method*, 4th ed., Nelson, a division of Thomson Canada Limited, Toronto, 2007.
- O. C. Zienkiewicz and R. L. Taylor, *The Finite Element Method*, 4th ed., Vols. 1 and 2., McGraw-Hill, New York, 1989 and 1991.
- J. N. Reddy, *An Introduction to the Finite Element Method*, 3rd ed., McGraw-Hill, New York 2002.
- K. J. Bathe, *Finite Element Procedures*, Prentice Hall, Englewood Cliffs, NJ, 1996.

PROBLEMS

The following problems are to be solved by FEA. It is recommended that you also solve the problems analytically, compare the two results, and explain any differences.

- 19-1** Solve Ex. 3-6.
- 19-2** For Ex. 3-10, apply a torque of 23 730 lbf · in, and determine the maximum shear stress and angle of twist. Use $\frac{1}{8}$ -in-thick plate elements.
- 19-3** The steel tube with the cross section shown is transmitting a torsional moment of 100 N · m. The tube wall thickness is 2.5 mm, all radii are $r = 6.25$ mm, and the tube is 500 mm long. For steel, let $E = 207$ GPa and $\nu = 0.29$. Determine the average shear stress in the wall and the angle of twist over the given length. Use 2.5-mm-thick plate elements.



- 19-4** For Fig. A-15-1, let $w = 2$ in, $d = 0.3$ in, and estimate K_t . Use 1/8-in-thick 2-D elements.
- 19-5** For Fig. A-15-3, let $w = 1.5$ in, $d = 1.0$ in, $r = 0.10$ in, and estimate K_t . Use 1/8-in-thick 2-D elements.
- 19-6** Solve Prob. 3-74, using solid elements. *Note:* You may omit the bottom part of the eyebolt to the left of the applied force, F .
- 19-7** Solve Prob. 3-78, using solid elements. *Note:* You may omit the bottom part of the eyebolt to the left of the applied force.
- 19-8** Solve Prob. 3-80, using solid elements. *Note:* Since there is a plane of symmetry, a one-half model can be constructed. However, be very careful to constrain the plane of symmetry properly to assure symmetry without overconstraint.
- 19-9** Solve Ex. 4-12, with $d = 1/8$ in, $a = 0.5$ in, $b = 1$ in, $c = 2$ in, $E = 30$ Mpsi, and $\nu = 0.29$, using beam elements.
- 19-10** Solve Ex. 4-13, modeling Fig. 4-14b with 2-D elements of 2-in thickness. Since this example uses symmetry, be careful to constrain the boundary conditions of the bottom horizontal surface appropriately.

- 19-11** Solve Prob. 4-14, using beam elements.
- 19-12** Solve Prob. 4-26, using beam elements. Pick a diameter, and solve for the slopes. Then, use Eq. 7-18, p. 369, to readjust the diameter. Use the new diameter to verify.
- 19-13** Solve Prob. 4-41, using beam elements.
- 19-14** Solve Prob. 4-64, using beam elements. Use a one-half model with symmetry. At the plane of symmetry, constrain translation and rotation.
- 19-15** Solve Prob. 4-65, using beam elements, with the diameter of the wire form being $d = \frac{1}{8}$ in, $l = 1$ in, $R = 1$ in, and $E = 30$ Mpsi.
- 19-16** Solve Prob. 4-67, using beam elements.
- 19-17** Solve Prob. 4-68, using beam elements. For this problem, the steel wire diameter is $d = \frac{1}{8}$ in, $R = 1$ in, and $F = 10$ lbf. Model the problem two ways: (a) Model the entire wire form, using 200 elements. (b) Model half the entire wire form, using 100 elements and symmetry. That is, model the form from point A to where the force is applied. Apply half the force at the top, and constrain the top horizontally and in rotation in the plane.
- 19-18** Solve Prob. 4-69, using solid elements. Use a one-half model with symmetry. Be very careful to constrain the plane of symmetry properly to assure symmetry without overconstraint.
- 19-19** An aluminum cylinder ($E_a = 70$ MPa, $\nu_a = 0.33$) with an outer diameter of 150 mm and inner diameter of 100 mm is to be press-fitted over a stainless-steel cylinder ($E_s = 190$ MPa, $\nu_s = 0.30$) with an outer diameter of 100.20 mm and inner diameter of 50 mm. Determine (a) the interface pressure p and (b) the maximum tangential stresses in the cylinders.

Solve the press-fit problem, using the following procedure. Using the plane-stress two-dimensional element, utilizing symmetry, create a quarter model meshing elements in the radial and tangential directions. The elements for each cylinder should be assigned their unique material properties. The interface between the two cylinders should have common nodes. To simulate the press fit, the inner cylinder will be forced to expand thermally. Assign a coefficient of expansion and temperature increase, α and ΔT , respectively, for the inner cylinder. Do this according to the relation $\delta = \alpha \Delta T b$, where δ and b are the radial interference and the outer radius of the inner member, respectively. Nodes along the straight edges of the quarter model should be fixed in the tangential directions, and free to deflect in the radial direction.

20

Statistical Considerations

Chapter Outline

- 20-1** Random Variables **958**
- 20-2** Arithmetic Mean, Variance, and Standard Deviation **960**
- 20-3** Probability Distributions **965**
- 20-4** Propagation of Error **972**
- 20-5** Linear Regression **974**

Statistics in mechanical design provides a method of dealing with characteristics whose values are variable. Products manufactured in large quantities—automobiles, watches, lawnmowers, washing machines, for example—have a life that is variable. One automobile may have so many defects that it must be repaired repeatedly during the first few months of operation while another may operate satisfactorily for years, requiring only minor maintenance.

Methods of quality control are deeply rooted in the use of statistics, and engineering designers need a knowledge of statistics to conform to quality-control standards. The variability inherent in limits and fits, in stress and strength, in bearing clearances, and in a multitude of other characteristics must be described numerically for proper control. It is not satisfactory to say that a product is expected to have a long and troublefree life. We must express such things as product life and product reliability in numerical form in order to achieve a specific quality goal. As noted in Sec. 1–10, uncertainties abound and require quantitative treatment. The algebra of real numbers, by itself, is not well suited to describing the presence of variation.

It is clear that consistencies in nature are stable, not in magnitude, but in the *pattern of variation*. Evidence gathered from nature by measurement is a mixture of systematic and random effects. It is the role of statistics to separate these, and, through the sensitive use of data, illuminate the obscure.

Some students will start this book after completing a formal course in statistics while others may have had brief encounters with statistics in their engineering courses. This contrast in background, together with space and time constraints, makes it very difficult to present an extensive integration of statistics with mechanical engineering design at this stage. Beyond first courses in mechanical design and engineering statistics, the student can begin to meaningfully integrate the two in a second course in design.

The intent of this chapter is to introduce some statistical concepts associated with basic reliability goals.

20–1 Random Variables

Consider an experiment to measure strength in a collection of 20 tensile-test specimens that have been machined from a like number of samples selected at random from a car-load shipment of, say, UNS G10200 cold-drawn steel. It is reasonable to expect that there will be differences in the ultimate tensile strengths S_{ut} of each of the individual test specimens. Such differences may occur because of differences in the sizes of the specimens, in the strength of the material itself, or both. Such an experiment is called a *random experiment*, because the specimens are selected at random. The strength S_{ut} determined by this experiment is called a *random*, or a *stochastic, variable*. So a random variable is a variable quantity, such as strength, size, or weight, whose value depends on the outcome of a random experiment.

Let us define a random variable x as the sum of the numbers obtained when two dice are tossed. Either die can display any number from 1 to 6. Figure 20–1 displays all possible outcomes in what is called the *sample space*. Note that x has a specific value

Figure 20–1

Sample space showing all possible outcomes of the toss of two dice.

1,1	1,2	1,3	1,4	1,5	1,6
2,1	2,2	2,3	2,4	2,5	2,6
3,1	3,2	3,3	3,4	3,5	3,6
4,1	4,2	4,3	4,4	4,5	4,6
5,1	5,2	5,3	5,4	5,5	5,6
6,1	6,2	6,3	6,4	6,5	6,6

Table 20-1

A Probability Distribution

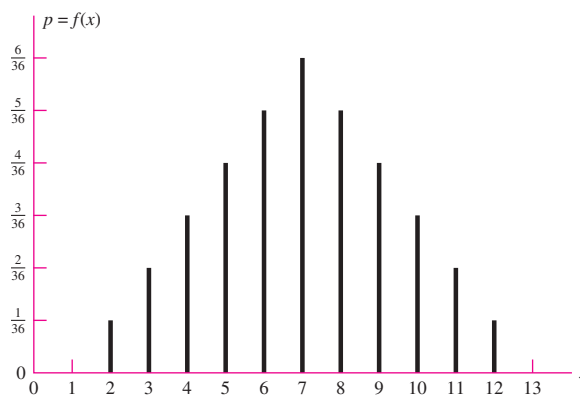
x	2	3	4	5	6	7	8	9	10	11	12
$f(x)$	$\frac{1}{36}$	$\frac{2}{36}$	$\frac{3}{36}$	$\frac{4}{36}$	$\frac{5}{36}$	$\frac{6}{36}$	$\frac{5}{36}$	$\frac{4}{36}$	$\frac{3}{36}$	$\frac{2}{36}$	$\frac{1}{36}$

Table 20-2A Cumulative Probability
Distribution

x	2	3	4	5	6	7	8	9	10	11	12
$F(x)$	$\frac{1}{36}$	$\frac{3}{36}$	$\frac{6}{36}$	$\frac{10}{36}$	$\frac{15}{36}$	$\frac{21}{36}$	$\frac{26}{36}$	$\frac{30}{36}$	$\frac{33}{36}$	$\frac{35}{36}$	$\frac{36}{36}$

Figure 20-2

Frequency distribution.



for each possible outcome—for example, the event 5, 4; $x = 5 + 4 = 9$. It is useful to form a table showing the values of x and the corresponding values of the probability of x , called $p = f(x)$. This is easily done from Fig. 20-1 merely by adding each outcome, determining how many times a specific value of x arises, and dividing by the total number of possible outcomes. The results are shown in Table 20-1. Any table like this, listing all possible values of a random variable and with the corresponding probabilities, is called a *probability distribution*.

The values of Table 20-1 are plotted in graphical form in Fig. 20-2. Here it is clear that the probability is a function of x . This *probability function* $p = f(x)$ is often called the *frequency function* or, sometimes, the *probability density function* (PDF). The probability that x is less than or equal to a certain value x_i can be obtained from the probability function by summing the probability of all x 's up to and including x_i . If we do this with Table 20-1, letting x_i equal 2, then 3, and so on, up to 12, we get Table 20-2, which is called a *cumulative probability distribution*. The function $F(x)$ in Table 20-2 is called a *cumulative density function* (CDF) of x . In terms of $f(x)$ it may be expressed mathematically in the general form

$$F(x_i) = \sum_{x_j \leq x_i} f(x_j) \quad (20-1)$$

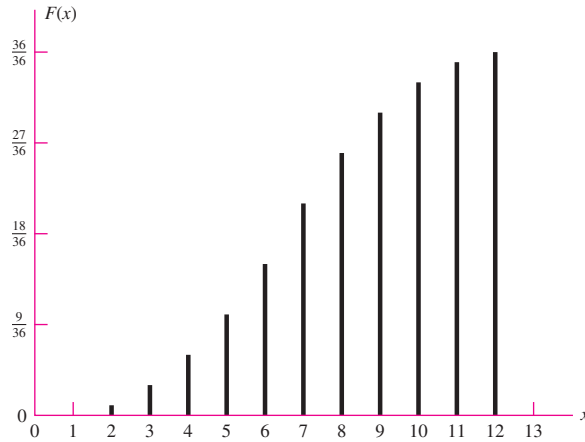
The cumulative distribution may also be plotted as a graph (Fig. 20-3).

The variable x of this example is called a *discrete random variable*, because x has only discrete values. A *continuous random variable* is one that can take on any value in a specified interval; for such variables, graphs like Figs. 20-2 and 20-3 would be plotted as continuous curves. For a continuous probability density function $F(x)$, the probability of obtaining an observation equal to or less than x is given by

$$F(x) = \int_{-\infty}^x f(x) dx \quad (20-2)$$

Figure 20-3

Cumulative frequency distribution.



where $f(x)$ is the probability per unit x . When $x \rightarrow \infty$, then

$$\int_{-\infty}^{\infty} f(x) dx = 1 \quad (20-3)$$

Differentiation of Eq. (20-2) gives

$$\frac{dF(x)}{dx} = f(x) \quad (20-4)$$

20-2 Arithmetic Mean, Variance, and Standard Deviation

In studying the variations in the mechanical properties and characteristics of mechanical elements, we shall generally be dealing with a finite number of elements. The total number of elements, called the *population*, may in some cases be quite large. In such cases it is usually impractical to measure the characteristics of each member of the population, because this involves destructive testing in some cases, and so we select a small part of the group, called a *sample*, for these determinations. Thus the *population* is the entire group, and the *sample* is a part of the population.

The arithmetic mean of a sample, called the *sample mean*, consisting of N elements, is defined by the equation

$$\bar{x} = \frac{x_1 + x_2 + x_3 + \cdots + x_N}{N} = \frac{1}{N} \sum_{i=1}^N x_i \quad (20-5)$$

Besides the arithmetic mean, it is useful to have another kind of measure that will tell us something about the spread, or dispersion, of the distribution. For any random variable x , the deviation of the i th observation from the mean is $x_i - \bar{x}$. But since the sum of the deviations so defined is always zero, we square them, and define *sample variance* as

$$s_x^2 = \frac{(x_1 - \bar{x})^2 + (x_2 - \bar{x})^2 + \cdots + (x_N - \bar{x})^2}{N - 1} = \frac{1}{N - 1} \sum_{i=1}^N (x_i - \bar{x})^2 \quad (20-6)$$

The *sample standard deviation*, defined as the square root of the sample variance, is

$$s_x = \sqrt{\frac{1}{N-1} \sum_{i=1}^N (x_i - \bar{x})^2} \quad (20-7)$$

Equation (20-7) is not well suited for use in a calculator. For such purposes, use the alternative form

$$s_x = \sqrt{\frac{\sum_{i=1}^N x_i^2 - \left(\sum_{i=1}^N x_i\right)^2 / N}{N-1}} = \sqrt{\frac{\sum_{i=1}^N x_i^2 - N\bar{x}^2}{N-1}} \quad (20-8)$$

for the standard deviation.

It should be observed that some authors define the variance and the standard deviation by using N instead of $N - 1$ in the denominator. For large values of N , there is very little difference. For small values, the denominator $N - 1$ actually gives a better estimate of the variance of the population from which the sample is taken.

Equations (20-5) to (20-8) apply specifically to the *sample* of a population. When an entire population is considered, the same equations apply, but \bar{x} and s_x are replaced with the symbols μ_x and $\hat{\sigma}_x$ respectively. The circumflex accent mark $\hat{}$, or “hat,” is used to avoid confusion with normal stress. For the population variance and standard deviation, N weighting is used in the denominators instead of $N - 1$.

Sometimes we are going to be dealing with the standard deviation of the strength of an element. So you must be careful not to be confused by the notation. Note that we are using the *capital letter S* for *strength* and the *lowercase letter s* for *standard deviation* as shown in the caption of the histogram in Fig. 20-4.

Figure 20-4 is called a *discrete frequency histogram*, which gives the number of occurrences, or class frequency f_i , within a given range. If the data are grouped in this fashion, then the mean and standard deviation are given by

$$\bar{x} = \frac{1}{N} \sum_{i=1}^k f_i x_i \quad (20-9)$$

and

$$s_x = \sqrt{\frac{\sum_{i=1}^k f_i x_i^2 - \left[\left(\sum_{i=1}^k f_i x_i\right)^2 / N\right]}{N-1}} = \sqrt{\frac{\sum_{i=1}^k f_i x_i^2 - N\bar{x}^2}{N-1}} \quad (20-10)$$

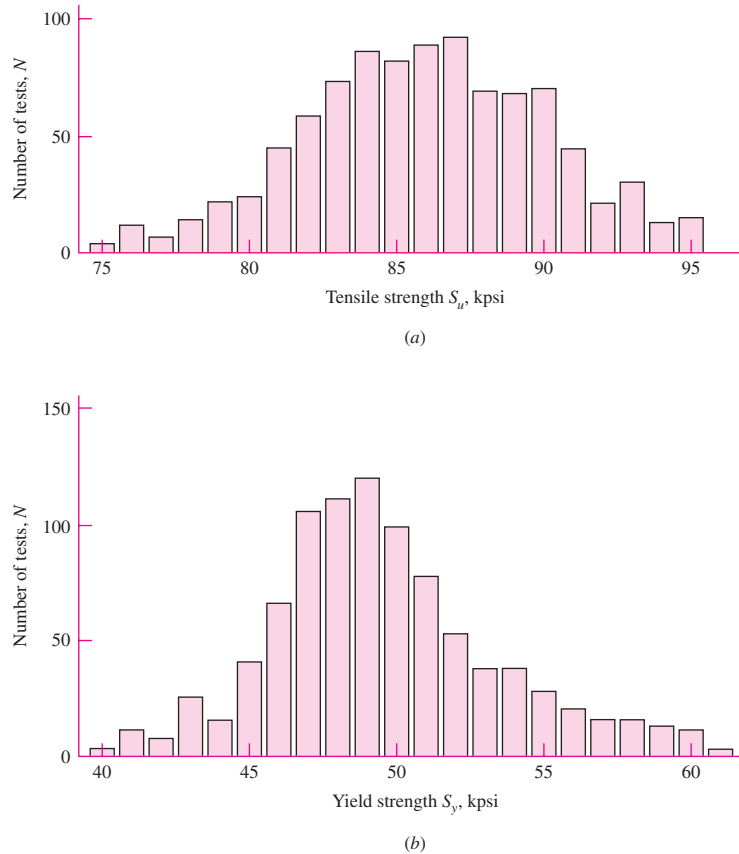
Here x_i , f_i , and k are class midpoint, frequency of occurrences within the range of the class, and the total number of classes, respectively. Also, the cumulative density function that gives the probability of an occurrence at class mark of x_i or less is

$$F_i = \frac{f_i w_i}{2} + \sum_{j=1}^{i-1} f_j w_j \quad (20-11)$$

where w_i represents the class width at x_i . For Fig. 20-4a, $k = 21$ and the class width is constant at $w = 1$ kpsi.

Figure 20-4

Distribution of tensile properties of hot-rolled UNS G10350 steel, as rolled. These tests were made from round bars varying in diameter from 1 to 9 in. (a) Tensile-strength distributions from 930 heats; $\bar{S}_u = 86.0$ kpsi, $s_{su} = 4.94$ kpsi. (b) Yield-strength distribution from 899 heats; $\bar{S}_y = 49.5$ kpsi, $s_{sy} = 5.36$ kpsi. (From Metals Handbook, vol. 1, 8th ed., American Society for Metals, Materials Park, OH 44073-0002, fig. 22, p. 64. Reprinted by permission of ASM International®, www.asminternational.org.)



Notation

In this book, we follow the convention of designating vectors by boldface characters, indicative of the fact that two or three quantities, such as direction and magnitude, are necessary to describe them. The same convention is widely used for random variables that can be characterized by specifying a mean and a standard deviation. We shall therefore use boldface characters to designate random variables as well as vectors. No confusion between the two is likely to arise.

The terms *stochastic variable* and *variate* are also used to mean a random variable. A *deterministic quantity* is something that has a single specific value. The mean value of a population is a deterministic quantity, and so is its standard deviation. A stochastic variable can be partially described by the mean and the standard deviation, or by the mean and the *coefficient of variation* defined by

$$C_x = \frac{s_x}{\bar{x}} \tag{20-12}$$

Thus the variate \mathbf{x} for the sample can be expressed in the following two ways:

$$\mathbf{x} = \mathbf{X}(\bar{x}, s_x) = \bar{x} \mathbf{X}(1, C_x) \tag{20-13}$$

where \mathbf{X} represents a variate probability distribution function. Note that the deterministic quantities \bar{x} , s_x , and C_x are all in normal italic font.

EXAMPLE 20-1

Five tons of 2-in round rod of 1030 hot-rolled steel has been received for workpiece stock. Nine standard-geometry tensile test specimens have been machined from random locations in various rods. In the test report, the ultimate tensile strength was given in kpsi. In ascending order (not necessary), these are displayed in Table 20-3. Find the mean \bar{x} , the standard deviation s_x , and the coefficient of variation C_x from the sample, such that these are best estimates of the parent population (the stock your plant will convert to product).

Table 20-3

Data Worksheet from
Nine Tensile Test
Specimens Taken from
a Shipment of 1030
Hot-Rolled Steel Barstock

S_{ult} kpsi	x	x^2
	62.8	3 943.84
	64.4	4 147.36
	65.8	4 329.64
	66.3	4 395.69
	68.1	4 637.61
	69.1	4 774.81
	69.8	4 872.04
	71.5	5 112.25
	74.0	5 476.00
	Σ 611.8	41 689.24

Solution From Eqs. (20-5) and (20-8),

$$\bar{x} = \frac{1}{N} \sum_{i=1}^9 x_i$$

and

$$s_x = \sqrt{\frac{\sum x_i^2 - (\sum x_i)^2 / N}{N - 1}}$$

It is computationally efficient to generate $\sum x$ and $\sum x^2$ before evaluating \bar{x} and s_x . This has been done in Table 20-3.

Answer

$$\bar{x} = \frac{1}{9}(611.8) = 67.98 \text{ kpsi}$$

Answer

$$s_x = \sqrt{\frac{41\,689.24 - 611.8^2/9}{9 - 1}} = 3.543 \text{ kpsi}$$

From Eq. (20-12),

Answer

$$C_x = \frac{s_x}{\bar{x}} = \frac{3.543}{67.98} = 0.0521$$

All three statistics are estimates of the parent population statistical parameters. Note that these results are independent of the distribution.

Multiple data entries may be identical or may be grouped in histogrammic form to suggest a distributional shape. If the original data are lost to the designer, the grouped data can still be reduced, although with some loss in computational precision.

EXAMPLE 20-2

The data in Ex. 20-1 have come to the designer in the histogrammic form of the first two columns of Table 20-4. Using the data in this form, find the mean \bar{x} , standard deviation s_x , and the coefficient of variation C_x .

Table 20-4

Grouped Data of Ultimate Tensile Strength from Nine Tensile Test Specimens from a Shipment of 1030 Hot-Rolled Steel Barstock

Class Midpoint x , kpsi	Class Frequency f	Extension fx	fx^2
63.5	2	127	8 064.50
66.5	2	133	8 844.50
69.5	3	208.5	14 480.75
72.5	2	145	10 513.50
	$\Sigma 9$	$\underline{613.5}$	$\underline{41 912.25}$

The data in Table 20-4 have been extended to provide $\Sigma f_i x_i$ and $\Sigma f_i x_i^2$.

Solution From Eq. (20-9),

Answer
$$\bar{x} = \frac{1}{N} \sum_{i=1}^4 f_i x_i = \frac{1}{9}(613.5) = 68.17 \text{ kpsi}$$

From Eq. (20-10),

Answer
$$s_x = \sqrt{\frac{41\,912.25 - 613.5^2/9}{9 - 1}} = 3.391 \text{ kpsi}$$

From Eq. (20-12),

Answer
$$C_x = \frac{s_x}{\bar{x}} = \frac{3.391}{68.17} = 0.0497$$

Note the small changes in \bar{x} , s_x , and C_x due to small changes in the summation terms.

The descriptive statistics developed, whether from ungrouped or grouped data, describe the ultimate tensile strength S_{ut} of the material from which we will form parts. Such description is not possible with a single number. In fact, sometimes two or three numbers plus identification or, at least, a robust approximation of the distribution are needed. As you look at the data in Ex. 20-1, consider the answers to these questions:

- Can we characterize the ultimate tensile strength by the mean, \bar{S}_{ut} ?
- Can we take the lowest ultimate tensile strength of 62.8 kpsi as a minimum? If we do, we will encounter some lesser ultimate strengths, because some of 100 specimens will be lower.
- Can we find the distribution of the ultimate tensile strength of the 1030 stock in Ex. 20-1? Yes, but it will take more specimens and require plotting on coordinates that rectify the data string.

20–3 Probability Distributions

There are a number of standard discrete and continuous probability distributions that are commonly applicable to engineering problems. In this section, we will discuss four important continuous probability distributions; the *Gaussian*, or *normal*, *distribution*; the *lognormal distribution*; the *uniform distribution*; and the *Weibull distribution*.

The Gaussian (Normal) Distribution

When Gauss asked the question, What distribution is the most likely parent to a set of data?, the answer was the distribution that bears his name. The *Gaussian*, or *normal*, *distribution* is an important one whose probability density function is expressed in terms of its mean μ_x and its standard deviation $\hat{\sigma}_x$ as

$$f(x) = \frac{1}{\hat{\sigma}_x \sqrt{2\pi}} \exp \left[-\frac{1}{2} \left(\frac{x - \mu_x}{\hat{\sigma}_x} \right)^2 \right] \quad (20-14)$$

With the notation described in Sec. 20–2, the normally distributed variate x can be expressed as

$$\mathbf{x} = \mathbf{N}(\mu_x, \hat{\sigma}_x) = \mu_x \mathbf{N}(1, C_x) \quad (20-15)$$

where \mathbf{N} represents the normal distribution function given by Eq. (20–14).

Since Eq. (20–14) is a probability density function, the area under it, as required, is unity. Plots of Eq. (20–14) are shown in Fig. 20–5 for small and large standard deviations. The bell-shaped curve is taller and narrower for small values of $\hat{\sigma}$ and shorter and broader for large values of $\hat{\sigma}$. Integration of Eq. (20–14) to find the cumulative density function $F(x)$ is not possible in closed form, but must be accomplished numerically. To avoid the need for many tables for different values of μ and $\hat{\sigma}$, the deviation from the mean is expressed in units of standard deviation by the transform

$$\mathbf{z} = \frac{\mathbf{x} - \mu_x}{\hat{\sigma}_x} \quad (20-16)$$

The integral of the transform is tabulated in Table A–10 and sketched in Fig. 20–6. The value of the normal cumulative density function is used so often, and manipulated in so

Figure 20–5

The shape of the normal distribution curve: (a) small $\hat{\sigma}$; (b) large $\hat{\sigma}$.

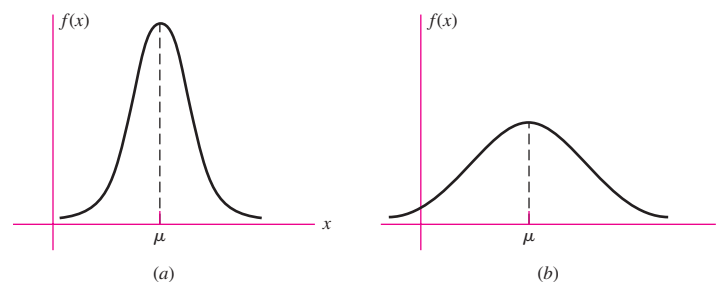
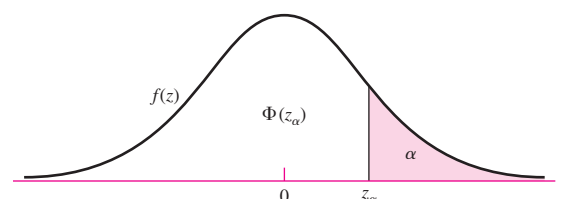


Figure 20–6

The standard normal distribution.



many equations, that it has its own particular symbol, $\Phi(z)$. The transformation variate z is normally distributed, with a mean of zero and a standard deviation of unity. That is, $z = \mathbf{N}(0, 1)$. The probability of an observation less than z is $\Phi(z)$ for negative values of z and $1 - \Phi(z)$ for positive values of z in Table A–10.

EXAMPLE 20–3

In a shipment of 250 connecting rods, the mean tensile strength is found to be 45 kpsi and the standard deviation 5 kpsi.

- (a) Assuming a normal distribution, how many rods can be expected to have a strength less than 39.5 kpsi?
- (b) How many are expected to have a strength between 39.5 and 59.5 kpsi?

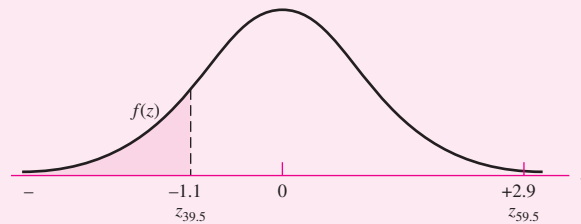
Solution

(a) Substituting in Eq. (20–16) gives the standardized z variable as

$$z_{39.5} = \frac{x - \mu_x}{\hat{\sigma}_x} = \frac{S - \bar{S}}{\hat{\sigma}_S} = \frac{39.5 - 45}{5} = -1.10$$

The probability that the strength is less than 39.5 kpsi can be designated as $F(z) = \Phi(-1.10)$. Using Table A–10, and referring to Fig. 20–7, we find $\Phi(z_{39.5}) = 0.1357$. So the number of rods having a strength less than 39.5 kpsi is,

Figure 20–7



Answer

$$N\Phi(z_{39.5}) = 250(0.1357) = 33.9 \approx 34$$

because $\Phi(z_{39.5})$ represents the proportion of the population N having a strength less than 39.5 kpsi.

(b) Corresponding to $S = 59.5$ kpsi, we have

$$z_{59.5} = \frac{59.5 - 45}{5} = 2.90$$

Referring again to Fig. 20–7, we see that the probability that the strength is less than 59.5 kpsi is $F(z) = \Phi(z_{59.5})$. Since the z variable is positive, we need to find the value complementary to unity. Thus, from Table A–10,

$$\Phi(2.90) = 1 - \Phi(-2.90) = 1 - 0.00187 = 0.99813$$

The probability that the strength lies between 39.5 and 59.5 kpsi is the area between the ordinates at $z_{39.5}$ and $z_{59.5}$ in Fig. 20–7. This probability is found to be

$$\begin{aligned} p &= \Phi(z_{59.5}) - \Phi(z_{39.5}) = \Phi(2.90) - \Phi(-1.10) \\ &= 0.99813 - 0.1357 = 0.86243 \end{aligned}$$

Therefore the number of rods expected to have strengths between 39.5 and 59.5 kpsi is

Answer

$$Np = 250(0.862) = 215.5 \approx 216$$

The Lognormal Distribution

Sometimes random variables have the following two characteristics:

- The distribution is asymmetrical about the mean.
- The variables have only positive values.

Such characteristics rule out the use of the normal distribution. There are several other distributions that are potentially useful in such situations, one of them being the lognormal (written as a single word) distribution. Especially when life is involved, such as fatigue life under stress or the wear life of rolling bearings, the lognormal distribution may be a very appropriate one to use.

The *lognormal distribution* is one in which the logarithms of the variate have a normal distribution. Thus the variate itself is said to be lognormally distributed. Let this variate be expressed as

$$\mathbf{x} = \mathbf{LN}(\mu_x, \hat{\sigma}_x) \quad (a)$$

Equation (a) states that the random variable x is distributed lognormally (*not a logarithm*) and that its mean value is μ_x and its standard deviation is $\hat{\sigma}_x$.

Now use the transformation

$$\mathbf{y} = \ln \mathbf{x} \quad (b)$$

Since, by definition, \mathbf{y} has a normal distribution, we can write

$$\mathbf{y} = \mathbf{N}(\mu_y, \hat{\sigma}_y) \quad (c)$$

This equation states that the random variable \mathbf{y} is normally distributed, its mean value is μ_y , and its standard deviation is $\hat{\sigma}_y$.

It is convenient to think of Eq. (a) as designating the *parent*, or *principal*, *distribution* while Eq. (b) represents the *companion*, or *subsidiary*, distribution.

The probability density function (PDF) for \mathbf{x} can be derived from that for \mathbf{y} ; see Eq. (20–14), and substitute y for x in that equation. Thus the PDF for the companion distribution is found to be

$$f(x) = \begin{cases} \frac{1}{x\hat{\sigma}_y\sqrt{2\pi}} \exp\left[-\frac{1}{2}\left(\frac{\ln x - \mu_y}{\hat{\sigma}_y}\right)^2\right] & \text{for } x > 0 \\ 0 & \text{for } x \leq 0 \end{cases} \quad (20-17)$$

The companion mean μ_y and standard deviation $\hat{\sigma}_y$ in Eq. (20–17) are obtained from

$$\mu_y = \ln \mu_x - \ln \sqrt{1 + C_x^2} \approx \ln \mu_x - \frac{1}{2}C_x^2 \quad (20-18)$$

$$\hat{\sigma}_y = \sqrt{\ln(1 + C_x^2)} \approx C_x \quad (20-19)$$

These equations make it possible to use Table A–10 for statistical computations and eliminate the need for a special table for the lognormal distribution.

EXAMPLE 20-4

One thousand specimens of 1020 steel were tested to rupture and the ultimate tensile strengths were reported as grouped data in Table 20–5. From Eq. (20–9),

$$\bar{x} = \frac{63\,625}{1000} = 63.625 \text{ kpsi}$$

Table 20-5

Worksheet for Ex. 20-4

Class Midpoint, kpsi	Frequency f_i	Extension		Observed PDF $f_i/(Nw)^*$	Normal Density $f(x)$	Lognormal Density $g(x)$
		$x_i f_i$	$x_i^2 f_i$			
56.5	2	113.0	6 384.5	0.002	0.0035	0.0026
57.5	18	1 035.0	59 512.5	0.018	0.0095	0.0082
58.5	23	1 345.5	78 711.75	0.023	0.0218	0.0209
59.5	31	1 844.5	109 747.75	0.031	0.0434	0.0440
60.5	83	5 021.5	303 800.75	0.083	0.0744	0.0773
61.5	109	6 703.5	412 265.25	0.109	0.110	0.1143
62.5	138	8 625.0	539 062.5	0.138	0.140	0.1434
63.5	151	9 588.5	608 869.75	0.151	0.1536	0.1539
64.5	139	8 965.5	578 274.75	0.139	0.1453	0.1424
65.5	130	8 515.0	577 732.5	0.130	0.1184	0.1142
66.5	82	5 453.0	362 624.5	0.082	0.0832	0.0800
67.5	49	3 307.5	223 256.25	0.049	0.0504	0.0493
68.5	28	1 918.0	131 382.0	0.028	0.0263	0.0268
69.5	11	764.5	53 132.75	0.011	0.0118	0.0129
70.5	4	282.0	19 881.0	0.004	0.0046	0.0056
71.5	2	143.0	10 224.5	0.002	0.0015	0.0022
	Σ 1 000	63 625	4 054 864	1.000		

* To compare discrete frequency data with continuous probability density functions f_i must be divided by Nw . Here, N = sample size = 1000; w = width of class interval = 1 kpsi.

From Eq. (20-10),

$$s_x = \sqrt{\frac{4\,054\,864 - 63\,625^2/1000}{1000 - 1}} = 2.594\,245 = 2.594 \text{ kpsi}$$

$$C_x = \frac{s_x}{\bar{x}} = \frac{2.594\,245}{63.625} = 0.040\,773 = 0.0408$$

From Eq. (20-14) the probability density function for a normal distribution with a mean of 63.625 and a standard deviation of 2.594 245 is

$$f(x) = \frac{1}{2.594\,245\sqrt{2\pi}} \exp\left[-\frac{1}{2}\left(\frac{x - 63.625}{2.594\,245}\right)^2\right]$$

For example, $f(63.625) = 0.1538$. The probability density $f(x)$ is evaluated at class midpoints to form the column of normal density in Table 20-5.

EXAMPLE 20-5 Continue Ex. 20-4, but fit a lognormal density function.

Solution From Eqs. (20-18) and (20-19),

$$\mu_y = \ln \mu_x - \ln \sqrt{1 + C_x^2} = \ln 63.625 - \frac{1}{2} \ln(1 + 0.040773^2) = 4.1522$$

$$\hat{\sigma}_y = \sqrt{\ln(1 + C_x^2)} = \sqrt{\ln(1 + 0.040773^2)} = 0.0408$$

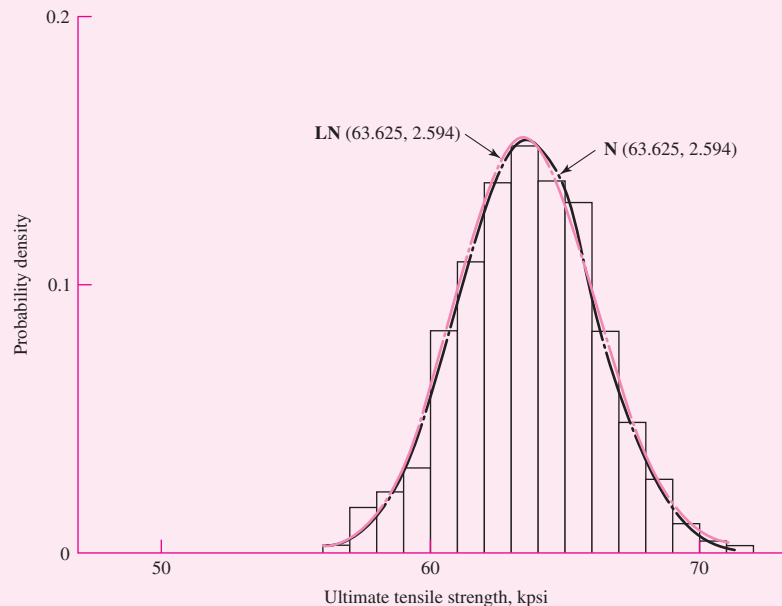
The probability density of a lognormal distribution is given in Eq. (20-17) as

$$g(x) = \frac{1}{x(0.0408)\sqrt{2\pi}} \exp\left[-\frac{1}{2}\left(\frac{\ln x - 4.1522}{0.0408}\right)^2\right] \quad \text{for } x > 0$$

For example, $g(63.625) = 0.1537$. This lognormal density has been added to Table 20-5. Plot the lognormal PDF superposed on the histogram of Ex. 20-4 along with the normal density. As seen in Fig. 20-8, both normal and lognormal densities fit well.

Figure 20-8

Histogram for Ex. 20-4 and Ex. 20-5 with normal and lognormal probability density functions superposed.



The Uniform Distribution

The uniform distribution is a closed-interval distribution that arises when the chance of an observation is the same as the chance for any other observation. If a is the lower bound and b is the upper bound, then the probability density function (PDF) for the uniform distribution is

$$f(x) = \begin{cases} 1/(b-a) & a \leq x \leq b \\ 0 & a > x > b \end{cases} \quad (20-20)$$

The cumulative density function (CDF), the integral of $f(x)$, is thus linear in the range $a \leq x \leq b$ given by

$$F(x) = \begin{cases} 0 & x < a \\ (x - a)/(b - a) & a \leq x \leq b \\ 1 & x > b \end{cases} \quad (20-21)$$

The mean and standard deviation are given by

$$\mu_x = \frac{a + b}{2} \quad (20-22)$$

$$\hat{\sigma}_x = \frac{b - a}{2\sqrt{3}} \quad (20-23)$$

The uniform distribution arises, among other places in manufacturing, where a part is mass-produced in an automatic operation and the dimension gradually changes through tool wear and increased tool forces between setups. If n is the part sequence or processing number, and n_f is the sequence number of the final-produced part before another setup, then the dimension x graphs linearly when plotted against the sequence number n . If the last proof part made during the setup has a dimension x_i , and the final part produced has the dimension x_f , the magnitude of the dimension at sequence number n is given by

$$x = x_i + (x_f - x_i) \frac{n}{n_f} = x_i + (x_f - x_i) F(x) \quad (a)$$

since n/n_f is a good approximation to the CDF. Solving Eq. (a) for $F(x)$ gives

$$F(x) = \frac{x - x_i}{x_f - x_i} \quad (b)$$

Compare this equation with the middle form of Eq. (20–21).

The Weibull Distribution

The Weibull distribution does not arise from classical statistics and is usually not included in elementary statistics textbooks. It is far more likely to be discussed and used in works dealing with experimental results, particularly reliability. It is a chameleon distribution, asymmetrical, with different values for the mean and the median. It contains within it a good approximation of the normal distribution as well as an exact representation of the exponential distribution. Most reliability information comes from laboratory and field service data, and because of its flexibility, the Weibull distribution is widely used.

The expression for reliability is the value of the cumulative density function complementary to unity. For the Weibull this value is both explicit and simple. The reliability given by the *three-parameter Weibull distribution* is

$$R(x) = \exp \left[- \left(\frac{x - x_0}{\theta - x_0} \right)^b \right] \quad x \geq x_0 \geq 0 \quad (20-24)$$

where the three parameters are

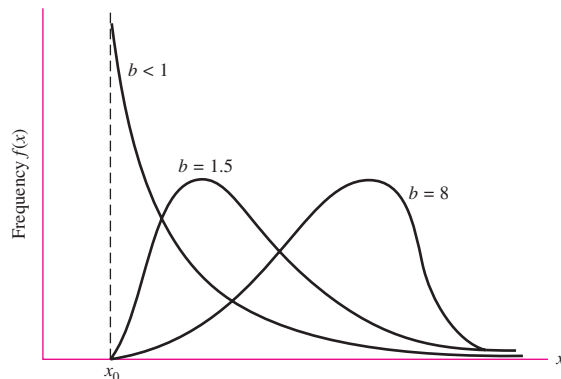
x_0 = minimum, guaranteed, value of x

θ = a characteristic or scale value ($\theta \geq x_0$)

b = a shape parameter ($b > 0$)

Figure 20–9

The density function of the Weibull distribution showing the effect of skewness of the shape parameter b .



For the special case when $x_0 = 0$, Eq. (20–24) becomes the two-parameter Weibull

$$R(x) = \exp \left[- \left(\frac{x}{\theta} \right)^b \right] \quad x \geq 0 \quad (20-25)$$

The characteristic variate θ serves a role similar to the mean and represents a value of x below which lie 63.2 percent of the observations.

The shape parameter b controls the skewness of the distribution. Figure 20–9 shows that large b 's skew the distribution to the right and small b 's skew it to the left. In the range $3.3 < b < 3.5$, approximate symmetry is obtained along with a good approximation to the normal distribution. When $b = 1$, the distribution is exponential.

Given a specific required reliability, solving Eq. (20–24) for x yields

$$x = x_0 + (\theta - x_0) \left(\ln \frac{1}{R} \right)^{1/b} \quad (20-26)$$

To find the probability function, we note that

$$F(x) = 1 - R(x) \quad (a)$$

$$f(x) = \frac{dF(x)}{dx} = - \frac{dR(x)}{dx} \quad (b)$$

Thus, for the Weibull,

$$f(x) = \begin{cases} \frac{b}{\theta - x_0} \left(\frac{x - x_0}{\theta - x_0} \right)^{b-1} \exp \left[- \left(\frac{x - x_0}{\theta - x_0} \right)^b \right] & x \geq x_0 \geq 0 \\ 0 & x \leq x_0 \end{cases} \quad (20-27)$$

The mean and standard deviation are given by

$$\mu_x = x_0 + (\theta - x_0) \Gamma(1 + 1/b) \quad (20-28)$$

$$\hat{\sigma}_x = (\theta - x_0) \sqrt{\Gamma(1 + 2/b) - \Gamma^2(1 + 1/b)} \quad (20-29)$$

where Γ is the gamma function and may be found tabulated in Table A–34. The notation for a Weibull distribution is¹

$$\mathbf{x} = \mathbf{W}(x_0, \theta, b) \quad (20-30)$$

¹To estimate the Weibull parameters from data, see J. E. Shigley and C. R. Mischke, *Mechanical Engineering Design*, 5th ed., 1989, McGraw-Hill, New York, Sec. 4–12. The Weibull parameters are determined for the data given in Ex. 2–4.

EXAMPLE 20–6

The Weibull is used extensively for expressing the reliability of rolling-contact bearings (see Sec. 11–4). Here, the variate x is put in dimensionless form as $x = L/L_{10}$ where L is bearing life, in say, number of cycles; and L_{10} is the manufacturer's rated life of the bearing where 10 percent of the bearings have failed (90 percent reliability).

Construct the distributional properties of a 02–30 mm deep-groove ball bearing if the Weibull parameters are $x_0 = 0.0200$, $\theta = 4.459$, and $b = 1.483$. Find the mean, median, L_{90} , and standard deviation.

Solution From Eq. (20–28) the mean dimensionless life is

Answer

$$\begin{aligned}\mu_x &= x_0 + (\theta - x_0)\Gamma(1 + 1/b) \\ &= 0.0200 + (4.459 - 0.0200)\Gamma(1 + 1/1.483) = 4.033\end{aligned}$$

This says that the average bearing life is 4.033 L_{10} . The median dimensionless life corresponds to $R = 0.5$, or L_{50} , and from Eq. (20–26) is

Answer

$$\begin{aligned}x_{0.5} &= x_0 + (\theta - x_0)\left(\ln \frac{1}{0.5}\right)^{1/b} = 0.0200 + (4.459 - 0.0200)\left(\ln \frac{1}{0.5}\right)^{1/1.483} \\ &= 3.487\end{aligned}$$

For L_{90} , $R = 0.1$, the dimensionless life x is

Answer

$$x_{0.90} = 0.0200 + (4.459 - 0.0200)\left(\ln \frac{1}{0.1}\right)^{1/1.483} = 7.810$$

The standard deviation of the dimensionless life is given by Eq. (20–29):

Answer

$$\begin{aligned}\hat{\sigma}_x &= (\theta - x_0)\sqrt{\Gamma(1 + 2/b) - \Gamma^2(1 + 1/b)} \\ &= (4.459 - 0.0200)\sqrt{\Gamma(1 + 2/1.483) - \Gamma^2(1 + 1/1.483)} = 2.753\end{aligned}$$

20–4 Propagation of Error

In the equation for axial stress

$$\sigma = \frac{F}{A} \tag{a}$$

suppose both the force F and the area A are random variables. Then Eq. (a) is written as

$$\boldsymbol{\sigma} = \frac{\mathbf{F}}{\mathbf{A}} \tag{b}$$

and we see that the stress $\boldsymbol{\sigma}$ is also a random variable. When Eq. (b) is solved, the errors inherent in \mathbf{F} and in \mathbf{A} are said to be *propagated* to the stress variate $\boldsymbol{\sigma}$. It is not hard to think of many other relations where this will occur.

Suppose we wish to add the two variates \mathbf{x} and \mathbf{y} to form a third variate \mathbf{z} . This is written as

$$\mathbf{z} = \mathbf{x} + \mathbf{y} \tag{c}$$

The mean is given as

$$\mu_z = \mu_x + \mu_y \tag{d}$$

Table 20–6

Means and Standard Deviations for Simple Algebraic Operations on Independent (Uncorrelated) Random Variables

Function	Mean (μ)	Standard Deviation ($\hat{\sigma}$)
a	a	0
x	μ_x	$\hat{\sigma}_x$
$\mathbf{x} + a$	$\mu_x + a$	$\hat{\sigma}_x$
$a\mathbf{x}$	$a\mu_x$	$a\hat{\sigma}_x$
$\mathbf{x} + \mathbf{y}$	$\mu_x + \mu_y$	$(\hat{\sigma}_x^2 + \hat{\sigma}_y^2)^{1/2}$
$\mathbf{x} - \mathbf{y}$	$\mu_x - \mu_y$	$(\hat{\sigma}_x^2 + \hat{\sigma}_y^2)^{1/2}$
\mathbf{xy}	$\mu_x\mu_y$	$\mu_x\mu_y(C_x^2 + C_y^2 + C_x^2C_y^2)^{1/2}$
$\mathbf{x/y}$	μ_x/μ_y	$\mu_x/\mu_y[(C_x^2 + C_y^2)/(1 + C_y^2)]^{1/2}$
\mathbf{x}^n	$\mu_x^n \left[1 + \frac{n(n-1)}{2} C_x^2 \right]$	$ n \mu_x^n C_x \left[1 + \frac{(n-1)^2}{4} C_x^2 \right]$
$1/\mathbf{x}$	$\frac{1}{\mu_x} (1 + C_x^2)$	$\frac{C_x}{\mu_x} (1 + C_x^2)$
$1/\mathbf{x}^2$	$\frac{1}{\mu_x^2} (1 + 3C_x^2)$	$\frac{2C_x}{\mu_x^2} (1 + \frac{9}{4} C_x^2)$
$1/\mathbf{x}^3$	$\frac{1}{\mu_x^3} (1 + 6C_x^2)$	$\frac{3C_x}{\mu_x^3} (1 + 4C_x^2)$
$1/\mathbf{x}^4$	$\frac{1}{\mu_x^4} (1 + 10C_x^2)$	$\frac{4C_x}{\mu_x^4} (1 + \frac{25}{4} C_x^2)$
$\sqrt{\mathbf{x}}$	$\sqrt{\mu_x} \left(1 - \frac{1}{8} C_x^2 \right)$	$\frac{\sqrt{\mu_x}}{2} C_x \left(1 + \frac{1}{16} C_x^2 \right)$
\mathbf{x}^2	$\mu_x^2 (1 + C_x^2)$	$2\mu_x^2 C_x \left(1 + \frac{1}{4} C_x^2 \right)$
\mathbf{x}^3	$\mu_x^3 (1 + 3C_x^2)$	$3\mu_x^3 C_x (1 + C_x^2)$
\mathbf{x}^4	$\mu_x^4 (1 + 6C_x^2)$	$4\mu_x^4 C_x \left(1 + \frac{9}{4} C_x^2 \right)$

Note: The coefficient of variation of variate x is $C_x = \hat{\sigma}_x/\mu_x$. For small COVs their square is small compared to unity, so the first term in the powers of x expressions are excellent approximations. For correlated products and quotients see Charles R. Mischke, *Mathematical Model Building*, 2nd rev. ed., Iowa State University Press, Ames, 1980, App. C.

The standard deviation follows the Pythagorean theorem. Thus the standard deviation for *both* addition and subtraction of independent variables is

$$\hat{\sigma}_z = \sqrt{\hat{\sigma}_x^2 + \hat{\sigma}_y^2} \quad (e)$$

Similar relations have been worked out for a variety of functions and are displayed in Table 20–6. The results shown can easily be combined to form other functions.

An unanswered question here is what is the distribution that results from the various operations? For answers to this question, statisticians use closure theorems and the central limit theorem.²

²See E. B. Haugen, *Probabilistic Mechanical Design*, Wiley, New York, 1980, pp. 49–54.

EXAMPLE 20-7 A round bar subject to a bending load has a diameter $\mathbf{d} = \mathbf{LN}(2.000, 0.002)$ in. This equivalency states that the mean diameter is $\mu_d = 2.000$ in and the standard deviation is $\hat{\sigma}_d = 0.002$ in. Find the mean and the standard deviation of the second moment of area.

Solution The second moment of area is given by the equation

$$\mathbf{I} = \frac{\pi \mathbf{d}^4}{64}$$

The coefficient of variation of the diameter is

$$C_d = \frac{\hat{\sigma}_d}{\mu_d} = \frac{0.002}{2} = 0.001$$

Using Table 20-6, we find

Answer $\mu_I = (\pi/64)\mu_d^4(1 + 6C_d^2) = (\pi/64)(2.000)^4[1 + 6(0.001)^2] = 0.785 \text{ in}^4$

Answer $\hat{\sigma}_I = 4\mu_d^4 C_d [1 + (9/4)C_d^2] = 4(2.000)^4(0.001)[1 + (9/4)(0.001)^2] = 0.064 \text{ in}^4$

These results can be expressed in the form

$$\mathbf{I} = \mathbf{LN}(0.785, 0.064) = 0.785\mathbf{LN}(1, 0.0815) \text{ in}^4$$

20-5 Linear Regression

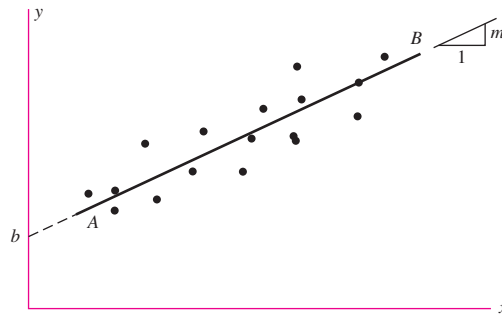
Statisticians use a process of analysis called *regression* to obtain a curve that best fits a set of data points. The process is called *linear regression* when the best-fitting straight line is to be found. The meaning of the word *best* is open to argument, because there can be many meanings. The usual method, and the one employed here, regards a line as “best” if it minimizes the squares of the deviations of the data points from the line.

Figure 20-10 shows a set of data points approximated by the line AB . The standard equation of a straight line is

$$y = mx + b \tag{20-31}$$

Figure 20-10

Set of data points approximated by regression line AB .



where m is the slope and b is the y intercept. Consider a set of N data points (x_i, y_i) . In general, the best-fit line will not intersect a data point. Thus, we can write

$$y_i = mx_i + b + \epsilon_i \quad (b)$$

where $\epsilon_i = y_i - y$ is the deviation between the data point and the line. The sum of the squares of the deviations is given by³

$$\mathcal{E} = \sum \epsilon_i^2 = \sum (y_i - mx_i - b)^2 \quad (c)$$

Minimizing \mathcal{E} , the sum of the squared errors, expecting a stationary point minimum, requires $\partial\mathcal{E}/\partial m = 0$ and $\partial\mathcal{E}/\partial b = 0$. This results in two simultaneous equations for the slope and y intercept denoted as \hat{m} and \hat{b} , respectively. Solving these equations results in

$$\hat{m} = \frac{N \sum x_i y_i - \sum x_i \sum y_i}{N \sum x_i^2 - (\sum x_i)^2} = \frac{\sum x_i y_i - N \bar{x} \bar{y}}{\sum x_i^2 - N \bar{x}^2} \quad (20-32)$$

$$\hat{b} = \frac{\sum y_i - \hat{m} \sum x_i}{N} = \bar{y} - \hat{m} \bar{x} \quad (20-33)$$

Once you have established a slope and an intercept, the next point of interest is to discover how well x and y correlate with each other. If the data points are scattered all over the xy plane, there is obviously no correlation. But if all the data points coincide with the regression line, then there is perfect correlation. Most statistical data will be in between these extremes. A *correlation coefficient* r , having the range $-1 \leq r \leq +1$, has been devised to answer this question. The formula is

$$r = \hat{m} \frac{s_x}{s_y} \quad (20-34)$$

where s_x and s_y are the standard deviations of the x coordinates and y coordinates of the data, respectively. If $r = 0$, there is no correlation; if $r = \pm 1$, there is perfect correlation. A positive or negative r indicates that the regression line has a positive or negative slope, respectively.

The standard deviations for \hat{m} and \hat{b} are given by

$$s_{\hat{m}} = \frac{s_{y \cdot x}}{\sqrt{\sum (x_i - \bar{x})^2}} \quad (20-35)$$

$$s_{\hat{b}} = s_{y \cdot x} \sqrt{\frac{1}{N} + \frac{\bar{x}^2}{\sum (x_i - \bar{x})^2}} \quad (20-36)$$

where

$$s_{y \cdot x} = \sqrt{\frac{\sum y_i^2 - \hat{b} \sum y_i - \hat{m} \sum x_i y_i}{N - 2}} \quad (20-37)$$

is the standard deviation of the scatter of the data from the regression line.

³From this point on, for economy of notation, the limits of the summation of $i(1, N)$ will not be displayed.

EXAMPLE 20-8

A specimen of a medium carbon steel was tested in tension. With an extensometer in place, the specimen was loaded then unloaded, to see if the extensometer reading returned to the no-load reading, then the next higher load was applied. The loads and extensometer elongations were reduced to stress σ and strain ϵ , producing the following data:

σ , psi	5033	10 068	15 104	20 143	35 267
ϵ	0.000 20	0.000 30	0.000 50	0.000 65	0.001 15

Find the mean Young's modulus \bar{E} and its standard deviation. Since the extensometer seems to have an initial reading at no load, use a $y = mx + b$ regression.

Solution From Table 20-7, $\bar{x} = 0.00280/5 = 0.00056$, $\bar{y} = 85\,615/5 = 17\,123$. Note that a regression line always contains the data centroid. From Eq. (20-32)

Answer

$$\hat{m} = \frac{5(65.229) - 0.0028(85\,615)}{5(0.000\,002\,125) - 0.0028^2} = 31.03(10^6) \text{ psi} = \bar{E}$$

From Eq. (20-33)

$$\hat{b} = \frac{0.000\,002\,125(85\,615) - 0.0028(65.229)}{5(0.000\,002\,125) - 0.0028^2} = -254.69 \text{ psi}$$

From Eq. (20-34), obtaining s_x and s_y from a statistics calculator routine,

$$\hat{r} = \frac{\hat{m}s_x}{s_y} = \frac{31\,031\,597.85(3\,162\,163\,10^{-4})}{11\,601.11} = 0.998$$

From Eq. (20-37), the scatter about the regression line is measured by the standard deviation $s_{y \cdot x}$ and is equal to

$$\begin{aligned} s_{y \cdot x} &= \sqrt{\frac{\sum y^2 - \hat{b} \sum y - \hat{m} \sum xy}{N - 2}} \\ &= \sqrt{\frac{2\,004\,328\,267 - (-254.69)(85\,615) - 31.03(10^6)(65.229)}{5 - 2}} \\ &= 811.1 \text{ psi} \end{aligned}$$

Table 20-7

Worksheet for Ex. 20-6

y σ , psi	x ϵ	x^2	xy	y^2	$(x - \bar{x})^2$
5 033	0.000 20	0.000 000 040	1.006 600	25 330 089	0.000 000 130
10 068	0.000 30	0.000 000 090	3.020 400	101 364 624	0.000 000 069
15 104	0.000 50	0.000 000 250	7.552 000	228 130 816	0.000 000 004
20 143	0.000 65	0.000 000 423	13.092 950	405 740 449	0.000 000 008
35 261	0.001 15	0.000 001 323	40.557 050	1 243 761 289	0.000 000 348
Σ 85 615	0.002 80	0.000 002 125	65.229 000	2 004 328 267	0.000 000 556

Note: $\bar{y} = 85\,615/5 = 17\,123$ psi, $\bar{x} = 0.00280/5 = 0.00056$.

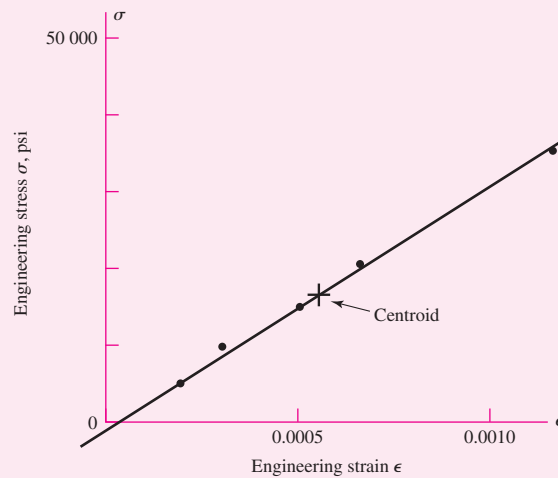
From Eq. (20–35), the standard deviation of \hat{m} is

$$\text{Answer } s_{\hat{m}} = \frac{s_{y \cdot x}}{\sqrt{\sum(x - \bar{x})^2}} = \frac{811.1}{\sqrt{0.000\,000\,558}} = 1.086(10^6) \text{ psi} = s_E$$

See Fig. 20–11 for the regression plot.

Figure 20–11

The data from Ex. 20–8 are plotted. The regression line passes through the data centroid and among the data points, minimizing the squared deviations.



PROBLEMS

All problems are analysis problems.

20–1

At a constant amplitude, completely reversed bending stress level, the cycles-to-failure experience with 69 specimens of 5160H steel from 1.25-in hexagonal bar stock was as follows:

L	60	70	80	90	100	110	120	130	140	150	160	170	180	190	200	210
f	2	1	3	5	8	12	6	10	8	5	2	3	2	1	0	1

where L is the life in thousands of cycles, and f is the class frequency of failures.

- Construct a histogram with class frequency f as ordinate.
- Estimate the mean and standard deviation of the life for the population from which the sample was drawn.

20–2

Determinations of the ultimate tensile strength S_{ut} of stainless steel sheet (17-7PH, condition TH 1050), in sizes from 0.016 to 0.062 in, in 197 tests combined into seven classes were

S_{ut} , kpsi	174	182	190	198	206	214	222
Frequency, f	6	9	44	67	53	12	6

where f is the class frequency. Find the mean and standard deviation.

- 20-3** A total of 58 AISI 1018 cold-drawn steel bars were tested to determine the 0.2 percent offset yield strength S_y . The results were

S_y , kpsi	64	68	72	76	80	84	88	92
f	2	6	6	9	19	10	4	2

where S_y is the class midpoint and f is the class frequency. Estimate the mean and standard deviation of S_y and its PDF assuming a normal distribution.

- 20-4** The base 10 logarithm of 55 cycles-to-failure observations on specimens subjected to a constant stress level in fatigue have been classified as follows:

y	5.625	5.875	6.125	6.375	6.625	6.875	7.125	7.375	7.625	7.875	8.125
f	1	0	0	3	3	6	14	15	10	2	1

Here y is the class midpoint and f is the class frequency.

- (a) Estimate the mean and standard deviation of the population from which the sample was taken and establish the normal PDF.
 (b) Plot the histogram and superpose the predicted class frequency from the normal fit.
- 20-5** A $\frac{1}{2}$ -in nominal diameter round is formed in an automatic screw machine operation that is initially set to produce a 0.5000-in diameter and is reset when tool wear produces diameters in excess of 0.5008 in. The stream of parts is thoroughly mixed and produces a uniform distribution of diameters.
- (a) Estimate the mean and standard deviation of the large batch of parts from setup to reset.
 (b) Find the expressions for the PDF and CDF of the population.
 (c) If, by inspection, the diameters less than 0.5002 in are removed, what are the new PDF and CDF as well as the mean and standard deviation of the diameters of the survivors of the inspection?

- 20-6** The only detail drawing of a machine part has a dimension smudged beyond legibility. The round in question was created in an automatic screw machine and 1000 parts are in stock. A random sample of 50 parts gave a mean dimension of $\bar{d} = 0.6241$ in and a standard deviation of $s = 0.000581$ in. Toleranced dimensions elsewhere are given in integral thousandths of an inch. Estimate the missing information on the drawing.

- 20-7** (a) The CDF of the variate x is $F(x) = 0.555x - 33$, where x is in millimeters. Find the PDF, the mean, the standard deviation, and the range numbers of the distribution.
 (b) In the expression $\sigma = \mathbf{F}/\mathbf{A}$, the force $\mathbf{F} = \text{LN}(3600, 300)$ lbf and the area is $\mathbf{A} = \text{LN}(0.112, 0.001)$ in². Estimate the mean, standard deviation, coefficient of variation, and distribution of σ .

- 20-8** A regression model of the form $y = a_1x + a_2x^2$ is desired. From the normal equations

$$\begin{aligned}\sum y &= a_1 \sum x + a_2 \sum x^2 \\ \sum xy &= a_1 \sum x^2 + a_2 \sum x^3\end{aligned}$$

show that

$$a_1 = \frac{\sum y \sum x^3 - \sum xy \sum x^2}{\sum x \sum x^3 - (\sum x^2)^2} \quad \text{and} \quad a_2 = \frac{\sum x \sum xy - \sum y \sum x^2}{\sum x \sum x^3 - (\sum x^2)^2}$$

For the data set

x	0.0	0.2	0.4	0.6	0.8	1.0
y	0.01	0.15	0.25	0.25	0.17	−0.01

find the regression equation and plot the data with the regression model.

20-9

R. W. Landgraf reported the following axial (push–pull) endurance strengths for steels of differing ultimate strengths:

S_u	S'_e	S_u	S'_e	S_u	S'_e
65	29.5	325	114	280	96
60	30	238	109	295	99
82	45	130	67	120	48
64	48	207	87	180	84
101	51	205	96	213	75
119	50	225	99	242	106
195	78	325	117	134	60
210	87	355	122	145	64
230	105	225	87	227	116
265	105				

(a) Plot the data with S'_e as ordinate and S_u as abscissa.

(b) Using the $y = mx + b$ linear regression model, find the regression line and plot.

20-10

In fatigue studies a parabola of the Gerber type

$$\frac{\sigma_a}{S_e} + \left(\frac{\sigma_m}{S_{ut}}\right)^2 = 1$$

is useful (see Sec. 6–12). Solved for σ_a the preceding equation becomes

$$\sigma_a = S_e - \frac{S_e}{S_{ut}^2} \sigma_m^2$$

This implies a regression model of the form $y = a_0 + a_2 x^2$. Show that the normal equations are

$$\begin{aligned} \sum y &= n a_0 + a_2 \sum x^2 \\ \sum xy &= a_0 \sum x + a_2 \sum x^3 \end{aligned}$$

and that

$$a_0 = \frac{\sum x^3 \sum y - \sum x^2 \sum xy}{n \sum x^3 - \sum x \sum x^2} \quad \text{and} \quad a_2 = \frac{n \sum xy - \sum x \sum y}{n \sum x^3 - \sum x \sum x^2}$$

Plot the data

x	20	40	60	80
y	19	17	13	7

superposed on a plot of the regression line.

- 20-11** Consider the following data collected on a single helical coil extension spring with an initial tension F_i and a spring rate k suspected of being related by the equation $F = F_i + kx$ where x is the deflection beyond initial. The data are

x , in	0.2	0.4	0.6	0.8	1.0	2.0
F , lbf	7.1	10.3	12.1	13.8	16.2	25.2

- (a) Estimate the mean and standard deviation of the initial tension F_i .
(b) Estimate the mean and standard deviation of the spring rate k .

- 20-12** In the expression for uniaxial strain $\epsilon = \delta/l$, the elongation is specified as $\delta \sim (0.0015, 0.00092)$ in and the length as $l \sim (2.0000, 0.0081)$ in. What are the mean, the standard deviation, and the coefficient of variation of the corresponding strain ϵ .

- 20-13** In Hooke's law for uniaxial stress, $\sigma = \epsilon E$, the strain is given as $\epsilon \sim (0.0005, 0.000034)$ and Young's modulus as $E \sim (29.5, 0.885)$ Mpsi. Find the mean, the standard deviation, and the coefficient of variation of the corresponding stress σ in psi.

- 20-14** The stretch of a uniform rod in tension is given by the formula $\delta = Fl/AE$. Suppose the terms in this equation are random variables and have parameters as follows:

$$\begin{aligned} \mathbf{F} &\sim (14.7, 1.3) \text{ kip} & \mathbf{A} &\sim (0.226, 0.003) \text{ in}^2 \\ \mathbf{l} &\sim (1.5, 0.004) \text{ in} & \mathbf{E} &\sim (29.5, 0.885) \text{ Mpsi} \end{aligned}$$

Estimate the mean, the standard deviation, and the coefficient of variation of the corresponding elongation δ in inches.

- 20-15** The maximum bending stress in a round bar in flexure occurs in the outer surface and is given by the equation $\sigma = 32M/\pi d^3$. If the moment is specified as $\mathbf{M} \sim (15\,000, 1350)$ lbf · in and the diameter is $\mathbf{d} \sim (2.00, 0.005)$ in, find the mean, the standard deviation, and the coefficient of variation of the corresponding stress σ in psi.

- 20-16** When a production process is wider than the tolerance interval, inspection rejects a low-end scrap fraction α with $x < x_1$ and an upper-end scrap fraction β with dimensions $x > x_2$. The surviving population has a new density function $g(x)$ related to the original $f(x)$ by a multiplier a . This is because any two observations x_i and x_j will have the same relative probability of occurrence as before. Show that

$$a = \frac{1}{F(x_2) - F(x_1)} = \frac{1}{1 - (\alpha + \beta)}$$

and

$$g(x) = \begin{cases} \frac{f(x)}{F(x_2) - F(x_1)} = \frac{f(x)}{1 - (\alpha + \beta)} & x_1 \leq x \leq x_2 \\ 0 & \text{otherwise} \end{cases}$$

- 20-17** An automatic screw machine produces a run of parts with a uniform distribution $\mathbf{d} = \mathbf{U}[0.748, 0.751]$ in because it was not reset when the diameters reached 0.750 in. The square brackets contain range numbers.

- (a) Estimate the mean, standard deviation, and PDF of the original production run if the parts are thoroughly mixed.
(b) Using the results of Prob. 20-16, find the new mean, standard deviation, and PDF. Superpose the PDF plots and compare.

- 20–18** A springmaker is supplying helical coil springs meeting the requirement for a spring rate k of 10 ± 1 lbf/in. The test program of the springmaker shows that the distribution of spring rate is well approximated by a normal distribution. The experience with inspection has shown that 8.1 percent are scrapped with $k < 9$ and 5.5 percent are scrapped with $k > 11$. Estimate the probability density function.
- 20–19** The lives of parts are often expressed as the number of cycles of operation that a specified percentage of a population will exceed before experiencing failure. The symbol L is used to designate this definition of life. Thus we can speak of L_{10} life as the number of cycles to failure exceeded by 90 percent of a population of parts. Using the mean and standard deviation for the data of Prob. 20–1, a normal distribution model, estimate the corresponding L_{10} life.
- 20–20** Fit a normal distribution to the histogram of Prob. 20–1. Superpose the probability density function on the $f/(Nw)$ histogrammic plot.
- 20–21** For Prob. 20–2, plot the histogram with $f/(Nw)$ as ordinate and superpose a normal distribution density function on the histogrammic plot.
- 20–22** For Prob. 20–3, plot the histogram with $f/(Nw)$ as ordinate and superpose a normal distribution probability density function on the histogrammic plot.
- 20–23** A 1018 cold-drawn steel has a 0.2 percent tensile yield strength $S_y = N(78.4, 5.90)$ kpsi. A round rod in tension is subjected to a load $P = N(40, 8.5)$ kip. If rod diameter d is 1.000 in, what is the probability that a random static tensile load P from P imposed on the shank with a 0.2 percent tensile load S_y from S_y will not yield?
- 20–24** A hot-rolled 1035 steel has a 0.2 percent tensile yield strength $S_y = LN(49.6, 3.81)$ kpsi. A round rod in tension is subjected to a load $P = LN(30, 5.1)$ kip. If the rod diameter d is 1.000 in, what is the probability that a random static tensile load P on a shank with a 0.2 percent yield strength S_y from S_y will not yield?
- 20–25** The tensile 0.2 percent offset yield strength of AISI 1137 cold-drawn steel rounds up to 1 inch in diameter from 2 mills and 25 heats is reported histogrammically as follows:
- | | | | | | | | | | | |
|-------|----|----|----|----|-----|-----|-----|-----|-----|-----|
| S_y | 93 | 95 | 97 | 99 | 101 | 103 | 105 | 107 | 109 | 111 |
| f | 19 | 25 | 38 | 17 | 12 | 10 | 5 | 4 | 4 | 2 |
- where S_y is the class midpoint in kpsi and f is the number in each class. Presuming the distribution is normal, what is the yield strength exceeded by 99 percent of the population?
- 20–26** Repeat Prob. 20–25, presuming the distribution is lognormal. What is the yield strength exceeded by 99 percent of the population? Compare the normal fit of Prob. 20–25 with the lognormal fit by superposing the PDFs and the histogrammic PDF.
- 20–27** A 1046 steel, water-quenched and tempered for 2 h at 1210°F, has a mean tensile strength of 105 kpsi and a yield mean strength of 82 kpsi. Test data from endurance strength testing at 10^4 -cycle life give $(S'_{fe})_{10^4} = W[79, 86.2, 2.60]$ kpsi. What are the mean, standard deviation, and coefficient of variation of $(S'_{fe})_{10^4}$?
- 20–28** An ASTM grade 40 cast iron has the following result from testing for ultimate tensile strength: $S_{ut} = W[27.7, 46.2, 4.38]$ kpsi. Find the mean and standard deviation of S_{ut} , and estimate the chance that the ultimate strength is less than 40 kpsi.
- 20–29** A cold-drawn 301SS stainless steel has an ultimate tensile strength given by $S_{ut} = W[151.9, 193.6, 8.00]$ kpsi. Find the mean and standard deviation.

20–30 A 100-70-04 nodular iron has tensile and yield strengths described by

$$S_{ut} = \mathbf{W}[47.6, 125.6, 11.84] \text{ kpsi}$$

$$S_y = \mathbf{W}[64.1, 81.0, 3.77] \text{ kpsi}$$

What is the chance that S_{ut} is less than 100 kpsi? What is the chance that S_y is less than 70 kpsi?

20–31 A 1038 heat-treated steel bolt in finished form provided the material from which a tensile test specimen was made. The testing of many such bolts led to the description $S_{ut} = \mathbf{W}[122.3, 134.6, 3.64]$ kpsi. What is the probability that the bolts meet the SAE grade 5 requirement of a minimum tensile strength of 120 kpsi? What is the probability that the bolts meet the SAE grade 7 requirement of a minimum tensile strength of 133 kpsi?

20–32 A 5160H steel was tested in fatigue and the distribution of cycles to failure at constant stress level was found to be $\mathbf{n} = \mathbf{W}[36.9, 133.6, 2.66]$ in 10^3 cycles. Plot the PDF of n and the PDF of the lognormal distribution having the same mean and standard deviation. What is the L10 life (see Prob. 20–19) predicted by both distributions?

20–33 A material was tested at steady fully reversed loading to determine the number of cycles to failure using 100 specimens. The results were

$(10^{-5})L$	3.05	3.55	4.05	4.55	5.05	5.55	6.05	6.55	7.05	7.55	8.05	8.55	9.05	9.55	10.05
f	3	7	11	16	21	13	13	6	2	0	4	3	0	0	1

where L is the life in cycles and f is the number in each class. Assuming a lognormal distribution, plot the theoretical PDF and the histogrammic PDF for comparison.

20–34 The ultimate tensile strength of an AISI 1117 cold-drawn steel is Weibullian, with $S_u = \mathbf{W}[70.3, 84.4, 2.01]$. What are the mean, the standard deviation, and the coefficient of variation?

20–35 A 60-45-15 nodular iron has a 0.2 percent yield strength S_y with a mean of 49.0 kpsi, a standard deviation of 4.2 kpsi, and a guaranteed yield strength of 33.8 kpsi. What are the Weibull parameters θ and b ?

20–36 A 35018 malleable iron has a 0.2 percent offset yield strength given by the Weibull distribution $S_y = \mathbf{W}[34.7, 39.0, 2.93]$ kpsi. What are the mean, the standard deviation, and the coefficient of variation?

20–37 The histogrammic results of steady load tests on 237 rolling-contact bearings are:

L	1	2	3	4	5	6	7	8	9	10	11	12
f	11	22	38	57	31	19	15	12	11	9	7	5

where L is the life in millions of revolutions and f is the number of failures. Fit a lognormal distribution to these data and plot the PDF with the histogrammic PDF superposed. From the lognormal distribution, estimate the life at which 10 percent of the bearings under this steady loading will have failed.

Useful Tables

Appendix

**Appendix Outline**

- A-1** Standard SI Prefixes **985**
- A-2** Conversion Factors **986**
- A-3** Optional SI Units for Bending, Torsion, Axial, and Direct Shear Stresses **987**
- A-4** Optional SI Units for Bending and Torsional Deflections **987**
- A-5** Physical Constants of Materials **987**
- A-6** Properties of Structural-Steel Angles **988–989**
- A-7** Properties of Structural-Steel Channels **990–991**
- A-8** Properties of Round Tubing **992**
- A-9** Shear, Moment, and Deflection of Beams **993–1000**
- A-10** Cumulative Distribution Function of Normal (Gaussian) Distribution **1001–1002**
- A-11** A Selection of International Tolerance Grades—Metric Series **1002**
- A-12** Fundamental Deviations for Shafts—Metric Series **1003**
- A-13** A Selection of International Tolerance Grades—Inch Series **1004**
- A-14** Fundamental Deviations for Shafts—Inch Series **1005**
- A-15** Charts of Theoretical Stress-Concentration Factors K_t **1006–1012**
- A-16** Approximate Stress-Concentration Factors K_t and K_{ts} for Bending a Round Bar or Tube with a Transverse Round Hole **1013–1014**
- A-17** Preferred Sizes and Renard (R-series) Numbers **1015**
- A-18** Geometric Properties **1016–1018**
- A-19** American Standard Pipe **1019**
- A-20** Deterministic ASTM Minimum Tensile and Yield Strengths for HR and CD Steels **1020**
- A-21** Mean Mechanical Properties of Some Heat-Treated Steels **1021–1022**
- A-22** Results of Tensile Tests of Some Metals **1023**
- A-23** Mean Monotonic and Cyclic Stress-Strain Properties of Selected Steels **1024–1025**
- A-24** Mechanical Properties of Three Non-Steel Metals **1026–1027**
- A-25** Stochastic Yield and Ultimate Strengths for Selected Materials **1028**
- A-26** Stochastic Parameters from Finite Life Fatigue Tests in Selected Metals **1029**

- A-27** Finite Life Fatigue Strengths of Selected Plain Carbon Steels **1030**
- A-28** Decimal Equivalents of Wire and Sheet-Metal Gauges **1031–1032**
- A-29** Dimensions of Square and Hexagonal Bolts **1033**
- A-30** Dimensions of Hexagonal Cap Screws and Heavy Hexagonal Screws **1034**
- A-31** Dimensions of Hexagonal Nuts **1035**
- A-32** Basic Dimensions of American Standard Plain Washers **1036**
- A-33** Dimensions of Metric Plain Washers **1037**
- A-34** Gamma Function **1038**

Table A-1

Standard SI Prefixes*†

Name	Symbol	Factor
exa	E	1 000 000 000 000 000 000 = 10^{18}
peta	P	1 000 000 000 000 000 = 10^{15}
tera	T	1 000 000 000 000 = 10^{12}
giga	G	1 000 000 000 = 10^9
mega	M	1 000 000 = 10^6
kilo	k	1 000 = 10^3
hecto‡	h	100 = 10^2
deka‡	da	10 = 10^1
deci‡	d	0.1 = 10^{-1}
centi‡	c	0.01 = 10^{-2}
milli	m	0.001 = 10^{-3}
micro	μ	0.000 001 = 10^{-6}
nano	n	0.000 000 001 = 10^{-9}
pico	p	0.000 000 000 001 = 10^{-12}
femto	f	0.000 000 000 000 001 = 10^{-15}
atto	a	0.000 000 000 000 000 001 = 10^{-18}

*If possible use multiple and submultiple prefixes in steps of 1000.

†Spaces are used in SI instead of commas to group numbers to avoid confusion with the practice in some European countries of using commas for decimal points.

‡Not recommended but sometimes encountered.

Table A-2

Conversion Factors A to Convert Input X to Output Y Using the Formula $Y = AX^*$

Multiply Input X	By Factor A	To Get Output Y	Multiply Input X	By Factor A	To Get Output Y
British thermal unit, Btu	1055	joule, J	mile/hour, mi/h	1.61	kilometer/hour, km/h
Btu/second, Btu/s	1.05	kilowatt, kW	mile/hour, mi/h	0.447	meter/second, m/s
calorie	4.19	joule, J	moment of inertia, lbm · ft ²	0.0421	kilogram-meter ² , kg · m ²
centimeter of mercury (0°C)	1.333	kilopascal, kPa	moment of inertia, lbm · in ²	293	kilogram-millimeter ² , kg · mm ²
centipoise, cP	0.001	pascal-second, Pa · s	moment of section (second moment of area), in ⁴	41.6	centimeter ⁴ , cm ⁴
degree (angle)	0.0174	radian, rad	ounce-force, oz	0.278	newton, N
foot, ft	0.305	meter, m	ounce-mass	0.0311	kilogram, kg
foot ² , ft ²	0.0929	meter ² , m ²	pound, lbf [†]	4.45	newton, N
foot/minute, ft/min	0.0051	meter/second, m/s	pound-foot, lbf · ft	1.36	newton-meter, N · m
foot-pound, ft · lbf	1.35	joule, J	pound/foot ² , lbf/ft ²	47.9	pascal, Pa
foot-pound/second, ft · lbf/s	1.35	watt, W	pound-inch, lbf · in	0.113	joule, J
foot/second, ft/s	0.305	meter/second, m/s	pound-inch, lbf · in	0.113	newton-meter, N · m
gallon (U.S.), gal	3.785	liter, L	pound/inch, lbf/in	175	newton/meter, N/m
horsepower, hp	0.746	kilowatt, kW	pound/inch ² , psi (lbf/in ²)	6.89	kilopascal, kPa
inch, in	0.0254	meter, m	pound-mass, lbm	0.454	kilogram, kg
inch, in	25.4	millimeter, mm	pound-mass/second, lbm/s	0.454	kilogram/second, kg/s
inch ² , in ²	645	millimeter ² , mm ²	quart (U.S. liquid), qt	946	milliliter, mL
inch of mercury (32°F)	3.386	kilopascal, kPa	section modulus, in ³	16.4	centimeter ³ , cm ³
kilopound, kip	4.45	kilonewton, kN	slug	14.6	kilogram, kg
kilopound/inch ² , kpsi (ksi)	6.89	megapascal, MPa (N/mm ²)	ton (short 2000 lbm)	907	kilogram, kg
mass, lbf · s ² /in	175	kilogram, kg	yard, yd	0.914	meter, m
mile, mi	1.610	kilometer, km			

*Approximate.

†The U.S. Customary system unit of the pound-force is often abbreviated as lbf to distinguish it from the pound-mass, which is abbreviated as lbm.

Table A-3

Optional SI Units for
Bending Stress

$$\sigma = Mc/I, \text{ Torsion Stress}$$

$$\tau = Tr/J, \text{ Axial Stress } \sigma$$

$$= F/A, \text{ and Direct}$$

Shear Stress

$$\tau = F/A$$

Bending and Torsion				Axial and Direct Shear		
M, T	I, J	c, r	σ, τ	F	A	σ, τ
N · m*	m ⁴	m	Pa	N*	m ²	Pa
N · m	cm ⁴	cm	MPa (N/mm ²)	N†	mm ²	MPa (N/mm ²)
N · m†	mm ⁴	mm	GPa	kN	m ²	kPa
kN · m	cm ⁴	cm	GPa	kN†	mm ²	GPa
N · mm†	mm ⁴	mm	MPa (N/mm ²)			

*Basic relation.

†Often preferred.

Table A-4

Optional SI Units for
Bending Deflection

$$y = f(FI^3/EI) \text{ or}$$

$$y = f(wI^4/EI) \text{ and}$$

Torsional Deflection

$$\theta = TI/GJ$$

Bending Deflection					Torsional Deflection				
F, wl	l	I	E	y	T	l	J	G	θ
N*	m	m ⁴	Pa	m	N · m*	m	m ⁴	Pa	rad
kN†	mm	mm ⁴	GPa	mm	N · m†	mm	mm ⁴	GPa	rad
kN	m	m ⁴	GPa	μ m	N · mm	mm	mm ⁴	MPa (N/mm ²)	rad
N	mm	mm ⁴	kPa	m	N · m	cm	cm ⁴	MPa (N/mm ²)	rad

*Basic relation.

†Often preferred.

Table A-5

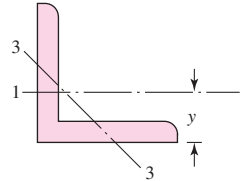
Physical Constants of Materials

Material	Modulus of Elasticity E		Modulus of Rigidity G		Poisson's Ratio ν	Unit Weight w		
	Mpsi	GPa	Mpsi	GPa		lbf/in³	lbf/ft³	kN/m³
Aluminum (all alloys)	10.4	71.7	3.9	26.9	0.333	0.098	169	26.6
Beryllium copper	18.0	124.0	7.0	48.3	0.285	0.297	513	80.6
Brass	15.4	106.0	5.82	40.1	0.324	0.309	534	83.8
Carbon steel	30.0	207.0	11.5	79.3	0.292	0.282	487	76.5
Cast iron (gray)	14.5	100.0	6.0	41.4	0.211	0.260	450	70.6
Copper	17.2	119.0	6.49	44.7	0.326	0.322	556	87.3
Douglas fir	1.6	11.0	0.6	4.1	0.33	0.016	28	4.3
Glass	6.7	46.2	2.7	18.6	0.245	0.094	162	25.4
Inconel	31.0	214.0	11.0	75.8	0.290	0.307	530	83.3
Lead	5.3	36.5	1.9	13.1	0.425	0.411	710	111.5
Magnesium	6.5	44.8	2.4	16.5	0.350	0.065	112	17.6
Molybdenum	48.0	331.0	17.0	117.0	0.307	0.368	636	100.0
Monel metal	26.0	179.0	9.5	65.5	0.320	0.319	551	86.6
Nickel silver	18.5	127.0	7.0	48.3	0.322	0.316	546	85.8
Nickel steel	30.0	207.0	11.5	79.3	0.291	0.280	484	76.0
Phosphor bronze	16.1	111.0	6.0	41.4	0.349	0.295	510	80.1
Stainless steel (18-8)	27.6	190.0	10.6	73.1	0.305	0.280	484	76.0
Titanium alloys	16.5	114.0	6.2	42.4	0.340	0.160	276	43.4

Table A-6

Properties of Structural-
Steel Angles*†

w = weight per foot, lbf/ft
 m = mass per meter, kg/m
 A = area, in² (cm²)
 I = second moment of area, in⁴ (cm⁴)
 k = radius of gyration, in (cm)
 y = centroidal distance, in (cm)
 Z = section modulus, in³, (cm³)



Size, in	w	A	I_{1-1}	k_{1-1}	Z_{1-1}	y	k_{3-3}
$1 \times 1 \times \frac{1}{8}$	0.80	0.234	0.021	0.298	0.029	0.290	0.191
$\times \frac{1}{4}$	1.49	0.437	0.036	0.287	0.054	0.336	0.193
$1\frac{1}{2} \times 1\frac{1}{2} \times \frac{1}{8}$	1.23	0.36	0.074	0.45	0.068	0.41	0.29
$\times \frac{1}{4}$	2.34	0.69	0.135	0.44	0.130	0.46	0.29
$2 \times 2 \times \frac{1}{8}$	1.65	0.484	0.190	0.626	0.131	0.546	0.398
$\times \frac{1}{4}$	3.19	0.938	0.348	0.609	0.247	0.592	0.391
$\times \frac{3}{8}$	4.7	1.36	0.479	0.594	0.351	0.636	0.389
$2\frac{1}{2} \times 2\frac{1}{2} \times \frac{1}{4}$	4.1	1.19	0.703	0.769	0.394	0.717	0.491
$\times \frac{3}{8}$	5.9	1.73	0.984	0.753	0.566	0.762	0.487
$3 \times 3 \times \frac{1}{4}$	4.9	1.44	1.24	0.930	0.577	0.842	0.592
$\times \frac{3}{8}$	7.2	2.11	1.76	0.913	0.833	0.888	0.587
$\times \frac{1}{2}$	9.4	2.75	2.22	0.898	1.07	0.932	0.584
$3\frac{1}{2} \times 3\frac{1}{2} \times \frac{1}{4}$	5.8	1.69	2.01	1.09	0.794	0.968	0.694
$\times \frac{3}{8}$	8.5	2.48	2.87	1.07	1.15	1.01	0.687
$\times \frac{1}{2}$	11.1	3.25	3.64	1.06	1.49	1.06	0.683
$4 \times 4 \times \frac{1}{4}$	6.6	1.94	3.04	1.25	1.05	1.09	0.795
$\times \frac{3}{8}$	9.8	2.86	4.36	1.23	1.52	1.14	0.788
$\times \frac{1}{2}$	12.8	3.75	5.56	1.22	1.97	1.18	0.782
$\times \frac{5}{8}$	15.7	4.61	6.66	1.20	2.40	1.23	0.779
$6 \times 6 \times \frac{3}{8}$	14.9	4.36	15.4	1.88	3.53	1.64	1.19
$\times \frac{1}{2}$	19.6	5.75	19.9	1.86	4.61	1.68	1.18
$\times \frac{5}{8}$	24.2	7.11	24.2	1.84	5.66	1.73	1.18
$\times \frac{3}{4}$	28.7	8.44	28.2	1.83	6.66	1.78	1.17

Table A-6

Properties of Structural-
Steel Angles*†
(Continued)

Size, mm	m	A	I_{1-1}	k_{1-1}	Z_{1-1}	y	k_{3-3}
25 × 25 × 3	1.11	1.42	0.80	0.75	0.45	0.72	0.48
× 4	1.45	1.85	1.01	0.74	0.58	0.76	0.48
× 5	1.77	2.26	1.20	0.73	0.71	0.80	0.48
40 × 40 × 4	2.42	3.08	4.47	1.21	1.55	1.12	0.78
× 5	2.97	3.79	5.43	1.20	1.91	1.16	0.77
× 6	3.52	4.48	6.31	1.19	2.26	1.20	0.77
50 × 50 × 5	3.77	4.80	11.0	1.51	3.05	1.40	0.97
× 6	4.47	5.59	12.8	1.50	3.61	1.45	0.97
× 8	5.82	7.41	16.3	1.48	4.68	1.52	0.96
60 × 60 × 5	4.57	5.82	19.4	1.82	4.45	1.64	1.17
× 6	5.42	6.91	22.8	1.82	5.29	1.69	1.17
× 8	7.09	9.03	29.2	1.80	6.89	1.77	1.16
× 10	8.69	11.1	34.9	1.78	8.41	1.85	1.16
80 × 80 × 6	7.34	9.35	55.8	2.44	9.57	2.17	1.57
× 8	9.63	12.3	72.2	2.43	12.6	2.26	1.56
× 10	11.9	15.1	87.5	2.41	15.4	2.34	1.55
100 × 100 × 8	12.2	15.5	145	3.06	19.9	2.74	1.96
× 12	17.8	22.7	207	3.02	29.1	2.90	1.94
× 15	21.9	27.9	249	2.98	35.6	3.02	1.93
150 × 150 × 10	23.0	29.3	624	4.62	56.9	4.03	2.97
× 12	27.3	34.8	737	4.60	67.7	4.12	2.95
× 15	33.8	43.0	898	4.57	83.5	4.25	2.93
× 18	40.1	51.0	1050	4.54	98.7	4.37	2.92

*Metric sizes also available in sizes of 45, 70, 90, 120, and 200 mm.

†These sizes are also available in aluminum alloy.

Table A-7

Properties of Structural-Steel Channels*

a, b = size, in (mm)

w = weight per foot, lbf/ft

m = mass per meter, kg/m

t = web thickness, in (mm)

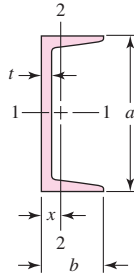
A = area, in² (cm²)

I = second moment of area, in⁴ (cm⁴)

k = radius of gyration, in (cm)

x = centroidal distance, in (cm)

Z = section modulus, in³ (cm³)



a , in	b , in	t	A	w	I_{1-1}	k_{1-1}	Z_{1-1}	I_{2-2}	k_{2-2}	Z_{2-2}	x
3	1.410	0.170	1.21	4.1	1.66	1.17	1.10	0.197	0.404	0.202	0.436
3	1.498	0.258	1.47	5.0	1.85	1.12	1.24	0.247	0.410	0.233	0.438
3	1.596	0.356	1.76	6.0	2.07	1.08	1.38	0.305	0.416	0.268	0.455
4	1.580	0.180	1.57	5.4	3.85	1.56	1.93	0.319	0.449	0.283	0.457
4	1.720	0.321	2.13	7.25	4.59	1.47	2.29	0.433	0.450	0.343	0.459
5	1.750	0.190	1.97	6.7	7.49	1.95	3.00	0.479	0.493	0.378	0.484
5	1.885	0.325	2.64	9.0	8.90	1.83	3.56	0.632	0.489	0.450	0.478
6	1.920	0.200	2.40	8.2	13.1	2.34	4.38	0.693	0.537	0.492	0.511
6	2.034	0.314	3.09	10.5	15.2	2.22	5.06	0.866	0.529	0.564	0.499
6	2.157	0.437	3.83	13.0	17.4	2.13	5.80	1.05	0.525	0.642	0.514
7	2.090	0.210	2.87	9.8	21.3	2.72	6.08	0.968	0.581	0.625	0.540
7	2.194	0.314	3.60	12.25	24.2	2.60	6.93	1.17	0.571	0.703	0.525
7	2.299	0.419	4.33	14.75	27.2	2.51	7.78	1.38	0.564	0.779	0.532
8	2.260	0.220	3.36	11.5	32.3	3.10	8.10	1.30	0.625	0.781	0.571
8	2.343	0.303	4.04	13.75	36.2	2.99	9.03	1.53	0.615	0.854	0.553
8	2.527	0.487	5.51	18.75	44.0	2.82	11.0	1.98	0.599	1.01	0.565
9	2.430	0.230	3.91	13.4	47.7	3.49	10.6	1.75	0.669	0.962	0.601
9	2.485	0.285	4.41	15.0	51.0	3.40	11.3	1.93	0.661	1.01	0.586
9	2.648	0.448	5.88	20.0	60.9	3.22	13.5	2.42	0.647	1.17	0.583
10	2.600	0.240	4.49	15.3	67.4	3.87	13.5	2.28	0.713	1.16	0.634
10	2.739	0.379	5.88	20.0	78.9	3.66	15.8	2.81	0.693	1.32	0.606
10	2.886	0.526	7.35	25.0	91.2	3.52	18.2	3.36	0.676	1.48	0.617
10	3.033	0.673	8.82	30.0	103	3.43	20.7	3.95	0.669	1.66	0.649
12	3.047	0.387	7.35	25.0	144	4.43	24.1	4.47	0.780	1.89	0.674
12	3.170	0.510	8.82	30.0	162	4.29	27.0	5.14	0.763	2.06	0.674

Table A-7Properties of Structural-Steel Channels (*Continued*)

$a \times b, \text{ mm}$	m	t	A	I_{1-1}	k_{1-1}	Z_{1-1}	I_{2-2}	k_{2-2}	Z_{2-2}	x
76 × 38	6.70	5.1	8.53	74.14	2.95	19.46	10.66	1.12	4.07	1.19
102 × 51	10.42	6.1	13.28	207.7	3.95	40.89	29.10	1.48	8.16	1.51
127 × 64	14.90	6.4	18.98	482.5	5.04	75.99	67.23	1.88	15.25	1.94
152 × 76	17.88	6.4	22.77	851.5	6.12	111.8	113.8	2.24	21.05	2.21
152 × 89	23.84	7.1	30.36	1166	6.20	153.0	215.1	2.66	35.70	2.86
178 × 76	20.84	6.6	26.54	1337	7.10	150.4	134.0	2.25	24.72	2.20
178 × 89	26.81	7.6	34.15	1753	7.16	197.2	241.0	2.66	39.29	2.76
203 × 76	23.82	7.1	30.34	1950	8.02	192.0	151.3	2.23	27.59	2.13
203 × 89	29.78	8.1	37.94	2491	8.10	245.2	264.4	2.64	42.34	2.65
229 × 76	26.06	7.6	33.20	2610	8.87	228.3	158.7	2.19	28.22	2.00
229 × 89	32.76	8.6	41.73	3387	9.01	296.4	285.0	2.61	44.82	2.53
254 × 76	28.29	8.1	36.03	3367	9.67	265.1	162.6	2.12	28.21	1.86
254 × 89	35.74	9.1	45.42	4448	9.88	350.2	302.4	2.58	46.70	2.42
305 × 89	41.69	10.2	53.11	7061	11.5	463.3	325.4	2.48	48.49	2.18
305 × 102	46.18	10.2	58.83	8214	11.8	539.0	499.5	2.91	66.59	2.66

*These sizes are also available in aluminum alloy.

Table A-8

Properties of Round
Tubing

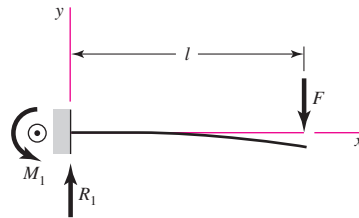
w_a = unit weight of aluminum tubing, lbf/ft
 w_s = unit weight of steel tubing, lbf/ft
 m = unit mass, kg/m
 A = area, in² (cm²)
 I = second moment of area, in⁴ (cm⁴)
 J = second polar moment of area, in⁴ (cm⁴)
 k = radius of gyration, in (cm)
 Z = section modulus, in³ (cm³)
 d, t = size (OD) and thickness, in (mm)

Size, in	w_a	w_s	A	I	k	Z	J
$1 \times \frac{1}{8}$	0.416	1.128	0.344	0.034	0.313	0.067	0.067
$1 \times \frac{1}{4}$	0.713	2.003	0.589	0.046	0.280	0.092	0.092
$1\frac{1}{2} \times \frac{1}{8}$	0.653	1.769	0.540	0.129	0.488	0.172	0.257
$1\frac{1}{2} \times \frac{1}{4}$	1.188	3.338	0.982	0.199	0.451	0.266	0.399
$2 \times \frac{1}{8}$	0.891	2.670	0.736	0.325	0.664	0.325	0.650
$2 \times \frac{1}{4}$	1.663	4.673	1.374	0.537	0.625	0.537	1.074
$2\frac{1}{2} \times \frac{1}{8}$	1.129	3.050	0.933	0.660	0.841	0.528	1.319
$2\frac{1}{2} \times \frac{1}{4}$	2.138	6.008	1.767	1.132	0.800	0.906	2.276
$3 \times \frac{1}{4}$	2.614	7.343	2.160	2.059	0.976	1.373	4.117
$3 \times \frac{3}{8}$	3.742	10.51	3.093	2.718	0.938	1.812	5.436
$4 \times \frac{3}{16}$	2.717	7.654	2.246	4.090	1.350	2.045	8.180
$4 \times \frac{3}{8}$	5.167	14.52	4.271	7.090	1.289	3.544	14.180

Size, mm	m	A	I	k	Z	J
12 × 2	0.490	0.628	0.082	0.361	0.136	0.163
16 × 2	0.687	0.879	0.220	0.500	0.275	0.440
16 × 3	0.956	1.225	0.273	0.472	0.341	0.545
20 × 4	1.569	2.010	0.684	0.583	0.684	1.367
25 × 4	2.060	2.638	1.508	0.756	1.206	3.015
25 × 5	2.452	3.140	1.669	0.729	1.336	3.338
30 × 4	2.550	3.266	2.827	0.930	1.885	5.652
30 × 5	3.065	3.925	3.192	0.901	2.128	6.381
42 × 4	3.727	4.773	8.717	1.351	4.151	17.430
42 × 5	4.536	5.809	10.130	1.320	4.825	20.255
50 × 4	4.512	5.778	15.409	1.632	6.164	30.810
50 × 5	5.517	7.065	18.118	1.601	7.247	36.226

Table A-9

Shear, Moment, and Deflection of Beams
(Note: Force and moment reactions are positive in the directions shown; equations for shear force V and bending moment M follow the sign conventions given in Sec. 3-2.)

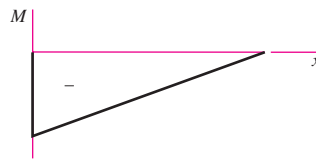
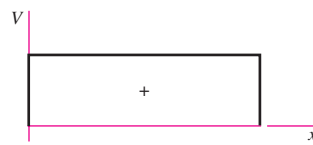
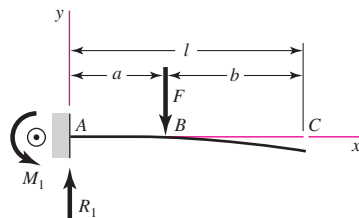
1 Cantilever—end load

$$R_1 = V = F \quad M_1 = Fl$$

$$M = F(x - l)$$

$$y = \frac{Fx^2}{6EI}(x - 3l)$$

$$y_{\max} = -\frac{Fl^3}{3EI}$$

**2 Cantilever—intermediate load**

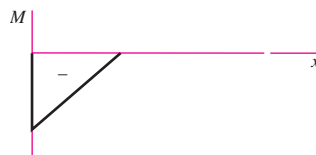
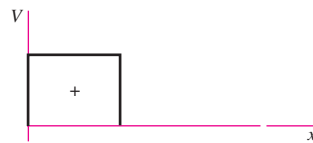
$$R_1 = V = F \quad M_1 = Fa$$

$$M_{AB} = F(x - a) \quad M_{BC} = 0$$

$$y_{AB} = \frac{Fx^2}{6EI}(x - 3a)$$

$$y_{BC} = \frac{Fa^2}{6EI}(a - 3x)$$

$$y_{\max} = \frac{Fa^2}{6EI}(a - 3l)$$

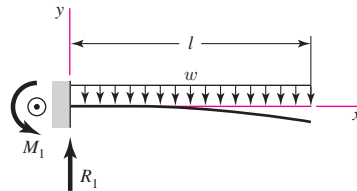


(continued)

Table A-9

Shear, Moment, and Deflection of Beams
(Continued)
(Note: Force and moment reactions are positive in the directions shown; equations for shear force V and bending moment M follow the sign conventions given in Sec. 3-2.)

3 Cantilever—uniform load


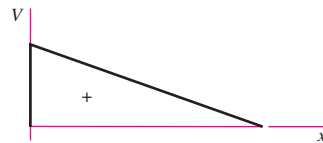


$$R_1 = wl \quad M_1 = \frac{wl^2}{2}$$

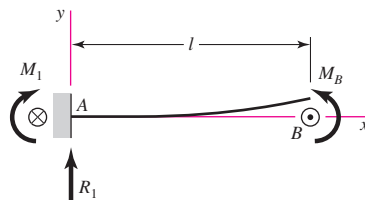
$$V = w(l - x) \quad M = -\frac{w}{2}(l - x)^2$$

$$y = \frac{wx^2}{24EI}(4lx - x^2 - 6l^2)$$

$$y_{\max} = -\frac{wl^4}{8EI}$$



4 Cantilever—moment load



$$R_1 = V = 0 \quad M_1 = M = M_B$$

$$y = \frac{M_B x^2}{2EI} \quad y_{\max} = \frac{M_B l^2}{2EI}$$


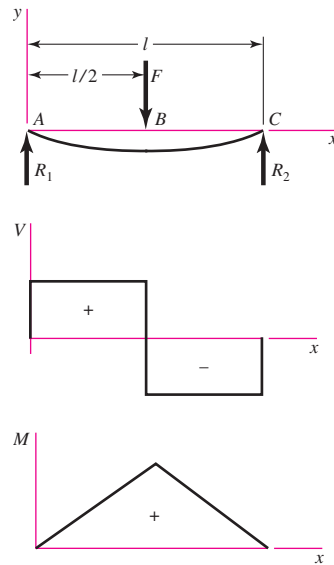


Table A-9

Shear, Moment, and
Deflection of Beams
(Continued)

(Note: Force and
moment reactions are
positive in the directions
shown; equations for
shear force V and
bending moment M
follow the sign
conventions given in
Sec. 3-2.)

5 Simple supports—center load

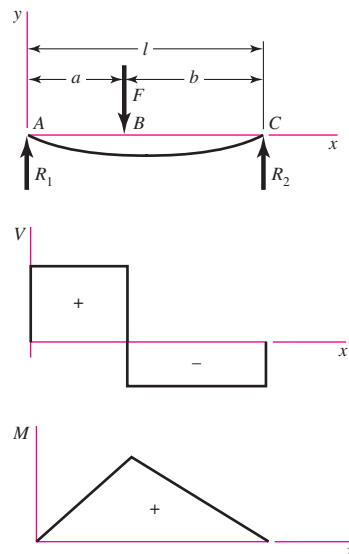
$$R_1 = R_2 = \frac{F}{2}$$

$$V_{AB} = R_1 \quad V_{BC} = -R_2$$

$$M_{AB} = \frac{Fx}{2} \quad M_{BC} = \frac{F}{2}(l-x)$$

$$y_{AB} = \frac{Fx}{48EI}(4x^2 - 3l^2)$$

$$y_{\max} = -\frac{Fl^3}{48EI}$$

6 Simple supports—intermediate load

$$R_1 = \frac{Fb}{l} \quad R_2 = \frac{Fa}{l}$$

$$V_{AB} = R_1 \quad V_{BC} = -R_2$$

$$M_{AB} = \frac{Fbx}{l} \quad M_{BC} = \frac{Fa}{l}(l-x)$$

$$y_{AB} = \frac{Fbx}{6EI}(x^2 + b^2 - l^2)$$

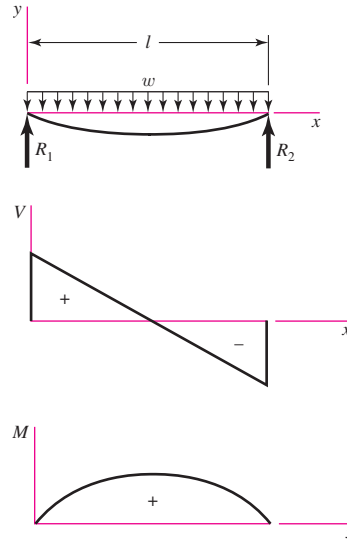
$$y_{BC} = \frac{Fa(l-x)}{6EI}(x^2 + a^2 - 2lx)$$

(continued)

Table A-9

Shear, Moment, and Deflection of Beams
(Continued)
(Note: Force and moment reactions are positive in the directions shown; equations for shear force V and bending moment M follow the sign conventions given in Sec. 3-2.)

7 Simple supports—uniform load



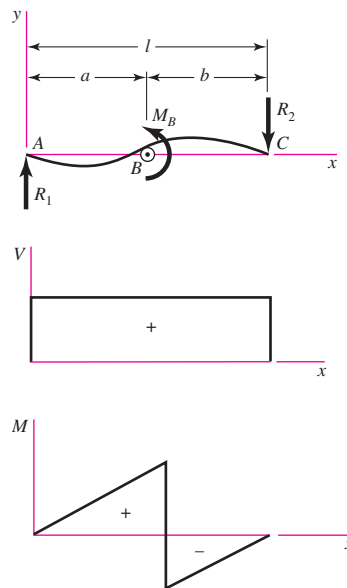
$$R_1 = R_2 = \frac{wl}{2} \quad V = \frac{wl}{2} - wx$$

$$M = \frac{wx}{2}(l - x)$$

$$y = \frac{wx}{24EI}(2lx^2 - x^3 - l^3)$$

$$y_{\max} = -\frac{5wl^4}{384EI}$$

8 Simple supports—moment load



$$R_1 = R_2 = \frac{M_B}{l} \quad V = \frac{M_B}{l}$$

$$M_{AB} = \frac{M_B x}{l} \quad M_{BC} = \frac{M_B}{l}(x - l)$$

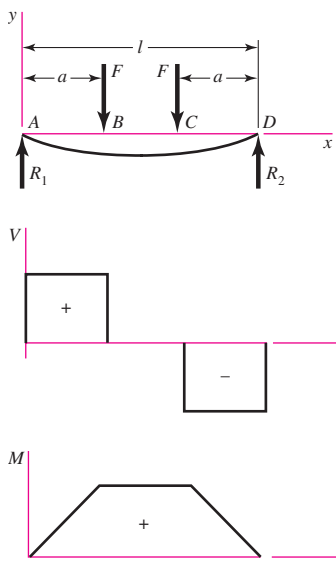
$$y_{AB} = \frac{M_B x}{6EI l}(x^2 + 3a^2 - 6al + 2l^2)$$

$$y_{BC} = \frac{M_B}{6EI l}[x^3 - 3lx^2 + x(2l^2 + 3a^2) - 3a^2 l]$$

Table A-9

Shear, Moment, and
Deflection of Beams
(Continued)

(Note: Force and
moment reactions are
positive in the directions
shown; equations for
shear force V and
bending moment M
follow the sign
conventions given in
Sec. 3-2.)

9 Simple supports—twin loads

$$R_1 = R_2 = F \quad V_{AB} = F \quad V_{BC} = 0$$

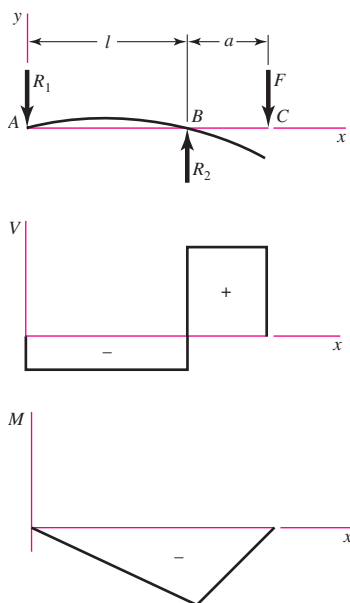
$$V_{CD} = -F$$

$$M_{AB} = Fx \quad M_{BC} = Fa \quad M_{CD} = F(l-x)$$

$$y_{AB} = \frac{Fx}{6EI}(x^2 + 3a^2 - 3la)$$

$$y_{BC} = \frac{Fa}{6EI}(3x^2 + a^2 - 3lx)$$

$$y_{\max} = \frac{Fa}{24EI}(4a^2 - 3l^2)$$

10 Simple supports—overhanging load

$$R_1 = \frac{Fa}{l} \quad R_2 = \frac{F}{l}(l+a)$$

$$V_{AB} = -\frac{Fa}{l} \quad V_{BC} = F$$

$$M_{AB} = -\frac{Fax}{l} \quad M_{BC} = F(x-l-a)$$

$$y_{AB} = \frac{Fax}{6EI}(l^2 - x^2)$$

$$y_{BC} = \frac{F(x-l)}{6EI}[(x-l)^2 - a(3x-l)]$$

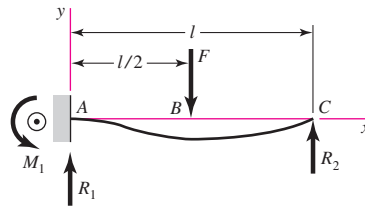
$$y_c = -\frac{Fa^2}{3EI}(l+a)$$

(continued)

Table A-9

Shear, Moment, and Deflection of Beams
(Continued)
(Note: Force and moment reactions are positive in the directions shown; equations for shear force V and bending moment M follow the sign conventions given in Sec. 3-2.)

11 One fixed and one simple support—center load



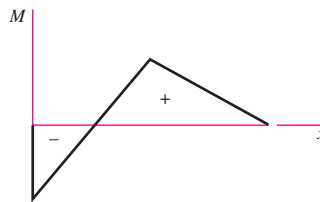
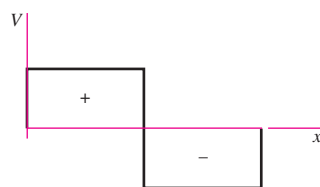
$$R_1 = \frac{11F}{16} \quad R_2 = \frac{5F}{16} \quad M_1 = \frac{3Fl}{16}$$

$$V_{AB} = R_1 \quad V_{BC} = -R_2$$

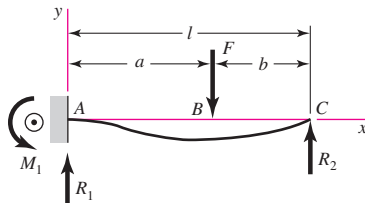
$$M_{AB} = \frac{F}{16}(11x - 3l) \quad M_{BC} = \frac{5F}{16}(l - x)$$

$$y_{AB} = \frac{Fx^2}{96EI}(11x - 9l)$$

$$y_{BC} = \frac{F(l-x)}{96EI}(5x^2 + 2l^2 - 10lx)$$



12 One fixed and one simple support—intermediate load



$$R_1 = \frac{Fb}{2l^3}(3l^2 - b^2) \quad R_2 = \frac{Fa^2}{2l^3}(3l - a)$$

$$M_1 = \frac{Fb}{2l^2}(l^2 - b^2)$$

$$V_{AB} = R_1 \quad V_{BC} = -R_2$$

$$M_{AB} = \frac{Fb}{2l^3}[b^2l - l^3 + x(3l^2 - b^2)]$$

$$M_{BC} = \frac{Fa^2}{2l^3}(3l^2 - 3lx - al + ax)$$

$$y_{AB} = \frac{Fbx^2}{12EI l^3}[3l(b^2 - l^2) + x(3l^2 - b^2)]$$

$$y_{BC} = y_{AB} - \frac{F(x-a)^3}{6EI}$$

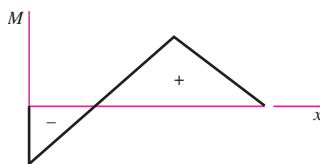
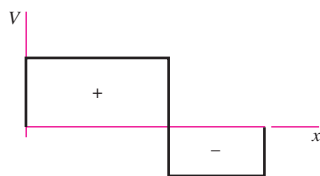
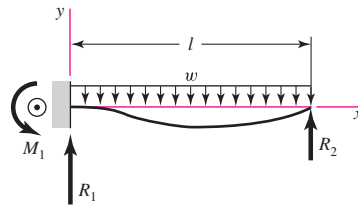


Table A-9

Shear, Moment, and
Deflection of Beams
(Continued)

(Note: Force and moment reactions are positive in the directions shown; equations for shear force V and bending moment M follow the sign conventions given in Sec. 3-2.)

13 One fixed and one simple support—uniform load

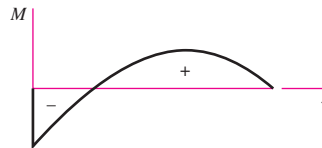
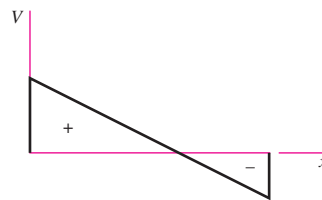


$$R_1 = \frac{5wl}{8} \quad R_2 = \frac{3wl}{8} \quad M_1 = \frac{wl^2}{8}$$

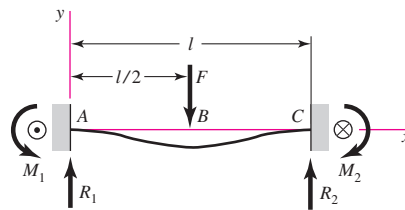
$$V = \frac{5wl}{8} - wx$$

$$M = -\frac{w}{8}(4x^2 - 5lx + l^2)$$

$$y = \frac{wx^2}{48EI}(l-x)(2x-3l)$$



14 Fixed supports—center load



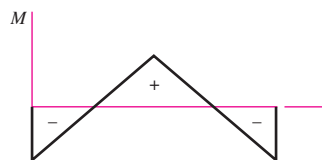
$$R_1 = R_2 = \frac{F}{2} \quad M_1 = M_2 = \frac{Fl}{8}$$

$$V_{AB} = -V_{BC} = \frac{F}{2}$$

$$M_{AB} = \frac{F}{8}(4x-l) \quad M_{BC} = \frac{F}{8}(3l-4x)$$

$$y_{AB} = \frac{Fx^2}{48EI}(4x-3l)$$

$$y_{\max} = -\frac{Fl^3}{192EI}$$

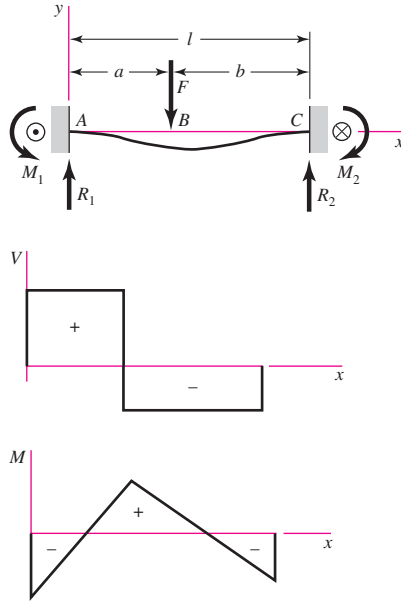


(continued)

Table A-9

Shear, Moment, and Deflection of Beams
(Continued)
(Note: Force and moment reactions are positive in the directions shown; equations for shear force V and bending moment M follow the sign conventions given in Sec. 3-2.)

15 Fixed supports—intermediate load



$$R_1 = \frac{Fb^2}{l^3}(3a + b) \quad R_2 = \frac{Fa^2}{l^3}(3b + a)$$

$$M_1 = \frac{Fab^2}{l^2} \quad M_2 = \frac{Fa^2b}{l^2}$$

$$V_{AB} = R_1 \quad V_{BC} = -R_2$$

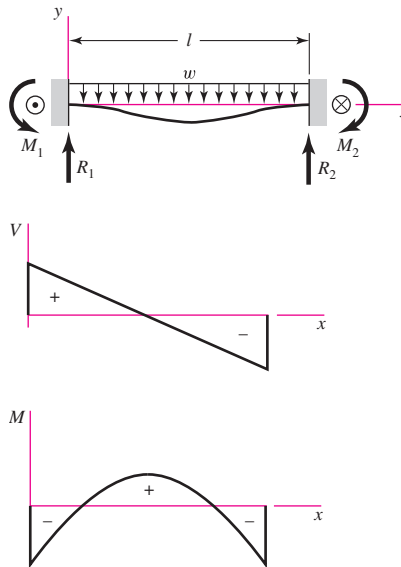
$$M_{AB} = \frac{Fb^2}{l^3}[x(3a + b) - al]$$

$$M_{BC} = M_{AB} - F(x - a)$$

$$y_{AB} = \frac{Fb^2x^2}{6EI l^3}[x(3a + b) - 3al]$$

$$y_{BC} = \frac{Fa^2(l - x)^2}{6EI l^3}[(l - x)(3b + a) - 3bl]$$

16 Fixed supports—uniform load



$$R_1 = R_2 = \frac{wl}{2} \quad M_1 = M_2 = \frac{wl^2}{12}$$

$$V = \frac{w}{2}(l - 2x)$$

$$M = \frac{w}{12}(6lx - 6x^2 - l^2)$$

$$y = -\frac{wx^2}{24EI}(l - x)^2$$

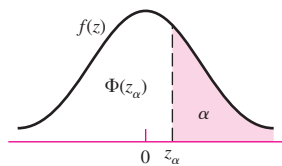
$$y_{\max} = -\frac{wl^4}{384EI}$$

Table A-10

Cumulative Distribution Function of Normal (Gaussian) Distribution

$$\Phi(z_\alpha) = \int_{-\infty}^{z_\alpha} \frac{1}{\sqrt{2\pi}} \exp\left(-\frac{u^2}{2}\right) du$$

$$= \begin{cases} \alpha & z_\alpha \leq 0 \\ 1 - \alpha & z_\alpha > 0 \end{cases}$$



Z_α	0.00	0.01	0.02	0.03	0.04	0.05	0.06	0.07	0.08	0.09
0.0	0.5000	0.4960	0.4920	0.4880	0.4840	0.4801	0.4761	0.4721	0.4681	0.4641
0.1	0.4602	0.4562	0.4522	0.4483	0.4443	0.4404	0.4364	0.4325	0.4286	0.4247
0.2	0.4207	0.4168	0.4129	0.4090	0.4052	0.4013	0.3974	0.3936	0.3897	0.3859
0.3	0.3821	0.3783	0.3745	0.3707	0.3669	0.3632	0.3594	0.3557	0.3520	0.3483
0.4	0.3446	0.3409	0.3372	0.3336	0.3300	0.3264	0.3238	0.3192	0.3156	0.3121
0.5	0.3085	0.3050	0.3015	0.2981	0.2946	0.2912	0.2877	0.2843	0.2810	0.2776
0.6	0.2743	0.2709	0.2676	0.2643	0.2611	0.2578	0.2546	0.2514	0.2483	0.2451
0.7	0.2420	0.2389	0.2358	0.2327	0.2296	0.2266	0.2236	0.2206	0.2177	0.2148
0.8	0.2119	0.2090	0.2061	0.2033	0.2005	0.1977	0.1949	0.1922	0.1894	0.1867
0.9	0.1841	0.1814	0.1788	0.1762	0.1736	0.1711	0.1685	0.1660	0.1635	0.1611
1.0	0.1587	0.1562	0.1539	0.1515	0.1492	0.1469	0.1446	0.1423	0.1401	0.1379
1.1	0.1357	0.1335	0.1314	0.1292	0.1271	0.1251	0.1230	0.1210	0.1190	0.1170
1.2	0.1151	0.1131	0.1112	0.1093	0.1075	0.1056	0.1038	0.1020	0.1003	0.0985
1.3	0.0968	0.0951	0.0934	0.0918	0.0901	0.0885	0.0869	0.0853	0.0838	0.0823
1.4	0.0808	0.0793	0.0778	0.0764	0.0749	0.0735	0.0721	0.0708	0.0694	0.0681
1.5	0.0668	0.0655	0.0643	0.0630	0.0618	0.0606	0.0594	0.0582	0.0571	0.0559
1.6	0.0548	0.0537	0.0526	0.0516	0.0505	0.0495	0.0485	0.0475	0.0465	0.0455
1.7	0.0446	0.0436	0.0427	0.0418	0.0409	0.0401	0.0392	0.0384	0.0375	0.0367
1.8	0.0359	0.0351	0.0344	0.0336	0.0329	0.0322	0.0314	0.0307	0.0301	0.0294
1.9	0.0287	0.0281	0.0274	0.0268	0.0262	0.0256	0.0250	0.0244	0.0239	0.0233
2.0	0.0228	0.0222	0.0217	0.0212	0.0207	0.0202	0.0197	0.0192	0.0188	0.0183
2.1	0.0179	0.0174	0.0170	0.0166	0.0162	0.0158	0.0154	0.0150	0.0146	0.0143
2.2	0.0139	0.0136	0.0132	0.0129	0.0125	0.0122	0.0119	0.0116	0.0113	0.0110
2.3	0.0107	0.0104	0.0102	0.00990	0.00964	0.00939	0.00914	0.00889	0.00866	0.00842
2.4	0.00820	0.00798	0.00776	0.00755	0.00734	0.00714	0.00695	0.00676	0.00657	0.00639
2.5	0.00621	0.00604	0.00587	0.00570	0.00554	0.00539	0.00523	0.00508	0.00494	0.00480
2.6	0.00466	0.00453	0.00440	0.00427	0.00415	0.00402	0.00391	0.00379	0.00368	0.00357
2.7	0.00347	0.00336	0.00326	0.00317	0.00307	0.00298	0.00289	0.00280	0.00272	0.00264
2.8	0.00256	0.00248	0.00240	0.00233	0.00226	0.00219	0.00212	0.00205	0.00199	0.00193
2.9	0.00187	0.00181	0.00175	0.00169	0.00164	0.00159	0.00154	0.00149	0.00144	0.00139

(continued)

Table A-10

Cumulative Distribution Function of Normal (Gaussian) Distribution (Continued)

Z_α	0.0	0.1	0.2	0.3	0.4	0.5	0.6	0.7	0.8	0.9
3	0.00135	0.0 ³ 968	0.0 ³ 687	0.0 ³ 483	0.0 ³ 337	0.0 ³ 233	0.0 ³ 159	0.0 ³ 108	0.0 ⁴ 723	0.0 ⁴ 481
4	0.0 ⁴ 317	0.0 ⁴ 207	0.0 ⁴ 133	0.0 ⁵ 854	0.0 ⁵ 541	0.0 ⁵ 340	0.0 ⁵ 211	0.0 ⁵ 130	0.0 ⁶ 793	0.0 ⁶ 479
5	0.0 ⁶ 287	0.0 ⁶ 170	0.0 ⁷ 996	0.0 ⁷ 579	0.0 ⁷ 333	0.0 ⁷ 190	0.0 ⁷ 107	0.0 ⁸ 599	0.0 ⁸ 332	0.0 ⁸ 182
6	0.0 ⁹ 987	0.0 ⁹ 530	0.0 ⁹ 282	0.0 ⁹ 149	0.0 ¹⁰ 777	0.0 ¹⁰ 402	0.0 ¹⁰ 206	0.0 ¹⁰ 104	0.0 ¹¹ 523	0.0 ¹¹ 260
z_α	-1.282	-1.643	-1.960	-2.326	-2.576	-3.090	-3.291	-3.891	-4.417	
$F(z_\alpha)$	0.10	0.05	0.025	0.010	0.005	0.001	0.0005	0.0001	0.000005	
$R(z_\alpha)$	0.90	0.95	0.975	0.990	0.995	0.999	0.9995	0.9999	0.999995	

Table A-11

A Selection of International Tolerance Grades—Metric Series (Size Ranges Are for Over the Lower Limit and Including the Upper Limit. All Values Are in Millimeters)

Source: Preferred Metric Limits and Fits, ANSI B4.2-1978. See also BSI 4500.

Basic Sizes	Tolerance Grades					
	IT6	IT7	IT8	IT9	IT10	IT11
0–3	0.006	0.010	0.014	0.025	0.040	0.060
3–6	0.008	0.012	0.018	0.030	0.048	0.075
6–10	0.009	0.015	0.022	0.036	0.058	0.090
10–18	0.011	0.018	0.027	0.043	0.070	0.110
18–30	0.013	0.021	0.033	0.052	0.084	0.130
30–50	0.016	0.025	0.039	0.062	0.100	0.160
50–80	0.019	0.030	0.046	0.074	0.120	0.190
80–120	0.022	0.035	0.054	0.087	0.140	0.220
120–180	0.025	0.040	0.063	0.100	0.160	0.250
180–250	0.029	0.046	0.072	0.115	0.185	0.290
250–315	0.032	0.052	0.081	0.130	0.210	0.320
315–400	0.036	0.057	0.089	0.140	0.230	0.360

Table A-12

Fundamental Deviations for Shafts—Metric Series

(Size Ranges Are for *Over* the Lower Limit and *Including* the Upper Limit. All Values Are in Millimeters)Source: *Preferred Metric Limits and Fits*, ANSI B4.2-1978. See also BSI 4500.

Basic Sizes	Upper-Deviation Letter					Lower-Deviation Letter				
	c	d	f	g	h	k	n	p	s	u
0–3	–0.060	–0.020	–0.006	–0.002	0	0	+0.004	+0.006	+0.014	+0.018
3–6	–0.070	–0.030	–0.010	–0.004	0	+0.001	+0.008	+0.012	+0.019	+0.023
6–10	–0.080	–0.040	–0.013	–0.005	0	+0.001	+0.010	+0.015	+0.023	+0.028
10–14	–0.095	–0.050	–0.016	–0.006	0	+0.001	+0.012	+0.018	+0.028	+0.033
14–18	–0.095	–0.050	–0.016	–0.006	0	+0.001	+0.012	+0.018	+0.028	+0.033
18–24	–0.110	–0.065	–0.020	–0.007	0	+0.002	+0.015	+0.022	+0.035	+0.041
24–30	–0.110	–0.065	–0.020	–0.007	0	+0.002	+0.015	+0.022	+0.035	+0.048
30–40	–0.120	–0.080	–0.025	–0.009	0	+0.002	+0.017	+0.026	+0.043	+0.060
40–50	–0.130	–0.080	–0.025	–0.009	0	+0.002	+0.017	+0.026	+0.043	+0.070
50–65	–0.140	–0.100	–0.030	–0.010	0	+0.002	+0.020	+0.032	+0.053	+0.087
65–80	–0.150	–0.100	–0.030	–0.010	0	+0.002	+0.020	+0.032	+0.059	+0.102
80–100	–0.170	–0.120	–0.036	–0.012	0	+0.003	+0.023	+0.037	+0.071	+0.124
100–120	–0.180	–0.120	–0.036	–0.012	0	+0.003	+0.023	+0.037	+0.079	+0.144
120–140	–0.200	–0.145	–0.043	–0.014	0	+0.003	+0.027	+0.043	+0.092	+0.170
140–160	–0.210	–0.145	–0.043	–0.014	0	+0.003	+0.027	+0.043	+0.100	+0.190
160–180	–0.230	–0.145	–0.043	–0.014	0	+0.003	+0.027	+0.043	+0.108	+0.210
180–200	–0.240	–0.170	–0.050	–0.015	0	+0.004	+0.031	+0.050	+0.122	+0.236
200–225	–0.260	–0.170	–0.050	–0.015	0	+0.004	+0.031	+0.050	+0.130	+0.258
225–250	–0.280	–0.170	–0.050	–0.015	0	+0.004	+0.031	+0.050	+0.140	+0.284
250–280	–0.300	–0.190	–0.056	–0.017	0	+0.004	+0.034	+0.056	+0.158	+0.315
280–315	–0.330	–0.190	–0.056	–0.017	0	+0.004	+0.034	+0.056	+0.170	+0.350
315–355	–0.360	–0.210	–0.062	–0.018	0	+0.004	+0.037	+0.062	+0.190	+0.390
355–400	–0.400	–0.210	–0.062	–0.018	0	+0.004	+0.037	+0.062	+0.208	+0.435

Table A-13

A Selection of International Tolerance Grades—Inch Series (Size Ranges Are for Over the Lower Limit and Including the Upper Limit. All Values Are in Inches, Converted from Table A-11)

Basic Sizes	Tolerance Grades					
	IT6	IT7	IT8	IT9	IT10	IT11
0–0.12	0.0002	0.0004	0.0006	0.0010	0.0016	0.0024
0.12–0.24	0.0003	0.0005	0.0007	0.0012	0.0019	0.0030
0.24–0.40	0.0004	0.0006	0.0009	0.0014	0.0023	0.0035
0.40–0.72	0.0004	0.0007	0.0011	0.0017	0.0028	0.0043
0.72–1.20	0.0005	0.0008	0.0013	0.0020	0.0033	0.0051
1.20–2.00	0.0006	0.0010	0.0015	0.0024	0.0039	0.0063
2.00–3.20	0.0007	0.0012	0.0018	0.0029	0.0047	0.0075
3.20–4.80	0.0009	0.0014	0.0021	0.0034	0.0055	0.0087
4.80–7.20	0.0010	0.0016	0.0025	0.0039	0.0063	0.0098
7.20–10.00	0.0011	0.0018	0.0028	0.0045	0.0073	0.0114
10.00–12.60	0.0013	0.0020	0.0032	0.0051	0.0083	0.0126
12.60–16.00	0.0014	0.0022	0.0035	0.0055	0.0091	0.0142

Table A-14

Fundamental Deviations for Shafts—Inch Series (Size Ranges Are for Over the Lower Limit and Including the Upper Limit. All Values Are in Inches, Converted from Table A-12)

Basic Sizes	Upper-Deviation Letter					Lower-Deviation Letter				
	c	d	f	g	h	k	n	p	s	u
0–0.12	–0.0024	–0.0008	–0.0002	–0.0001	0	0	+0.0002	+0.0002	+0.0006	+0.0007
0.12–0.24	–0.0028	–0.0012	–0.0004	–0.0002	0	0	+0.0003	+0.0005	+0.0007	+0.0009
0.24–0.40	–0.0031	–0.0016	–0.0005	–0.0002	0	0	+0.0004	+0.0006	+0.0009	+0.0011
0.40–0.72	–0.0037	–0.0020	–0.0006	–0.0002	0	0	+0.0005	+0.0007	+0.0011	+0.0013
0.72–0.96	–0.0043	–0.0026	–0.0008	–0.0003	0	+0.0001	+0.0006	+0.0009	+0.0014	+0.0016
0.96–1.20	–0.0043	–0.0026	–0.0008	–0.0003	0	+0.0001	+0.0006	+0.0009	+0.0014	+0.0019
1.20–1.60	–0.0047	–0.0031	–0.0010	–0.0004	0	+0.0001	+0.0007	+0.0010	+0.0017	+0.0024
1.60–2.00	–0.0051	–0.0031	–0.0010	–0.0004	0	+0.0001	+0.0007	+0.0010	+0.0017	+0.0028
2.00–2.60	–0.0055	–0.0039	–0.0012	–0.0004	0	+0.0001	+0.0008	+0.0013	+0.0021	+0.0034
2.60–3.20	–0.0059	–0.0039	–0.0012	–0.0004	0	+0.0001	+0.0008	+0.0013	+0.0023	+0.0040
3.20–4.00	–0.0067	–0.0047	–0.0014	–0.0005	0	+0.0001	+0.0009	+0.0015	+0.0028	+0.0049
4.00–4.80	–0.0071	–0.0047	–0.0014	–0.0005	0	+0.0001	+0.0009	+0.0015	+0.0031	+0.0057
4.80–5.60	–0.0079	–0.0057	–0.0017	–0.0006	0	+0.0001	+0.0011	+0.0017	+0.0036	+0.0067
5.60–6.40	–0.0083	–0.0057	–0.0017	–0.0006	0	+0.0001	+0.0011	+0.0017	+0.0039	+0.0075
6.40–7.20	–0.0091	–0.0057	–0.0017	–0.0006	0	+0.0001	+0.0011	+0.0017	+0.0043	+0.0083
7.20–8.00	–0.0094	–0.0067	–0.0020	–0.0006	0	+0.0002	+0.0012	+0.0020	+0.0048	+0.0093
8.00–9.00	–0.0102	–0.0067	–0.0020	–0.0006	0	+0.0002	+0.0012	+0.0020	+0.0051	+0.0102
9.00–10.00	–0.0110	–0.0067	–0.0020	–0.0006	0	+0.0002	+0.0012	+0.0020	+0.0055	+0.0112
10.00–11.20	–0.0118	–0.0075	–0.0022	–0.0007	0	+0.0002	+0.0013	+0.0022	+0.0062	+0.0124
11.20–12.60	–0.0130	–0.0075	–0.0022	–0.0007	0	+0.0002	+0.0013	+0.0022	+0.0067	+0.0130
12.60–14.20	–0.0142	–0.0083	–0.0024	–0.0007	0	+0.0002	+0.0015	+0.0024	+0.0075	+0.0154
14.20–16.00	–0.0157	–0.0083	–0.0024	–0.0007	0	+0.0002	+0.0015	+0.0024	+0.0082	+0.0171

Table A-15

Charts of Theoretical Stress-Concentration Factors K_t^*

Figure A-15-1

Bar in tension or simple compression with a transverse hole. $\sigma_0 = F/A$, where $A = (w - d)t$ and t is the thickness.

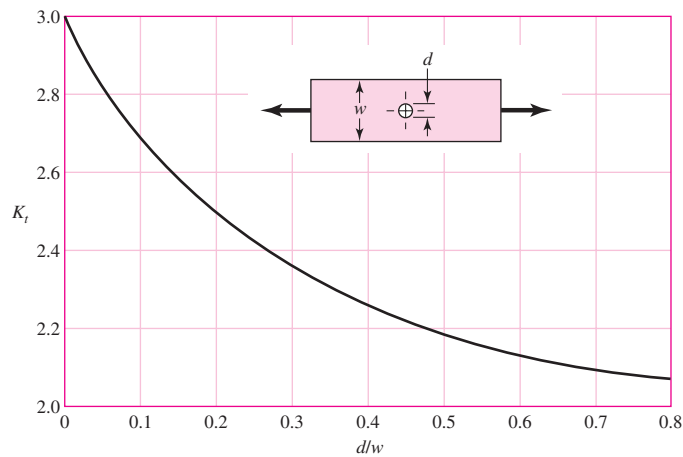


Figure A-15-2

Rectangular bar with a transverse hole in bending. $\sigma_0 = Mc/I$, where $I = (w - d)h^3/12$.

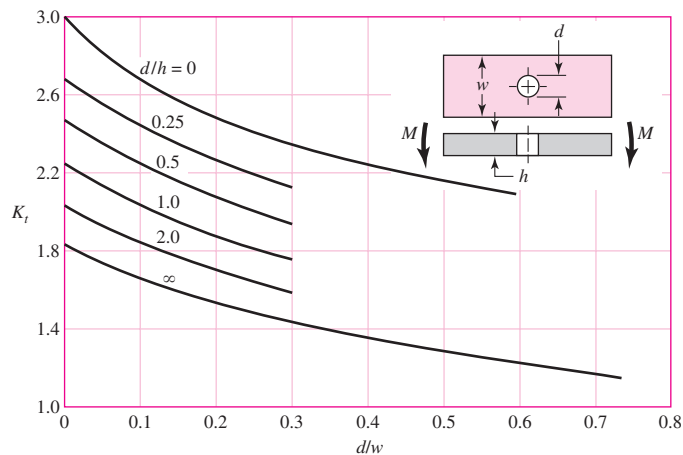


Figure A-15-3

Notched rectangular bar in tension or simple compression. $\sigma_0 = F/A$, where $A = dt$ and t is the thickness.

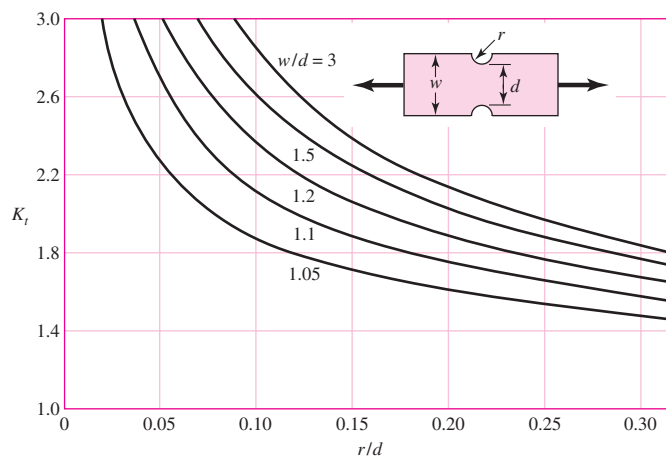
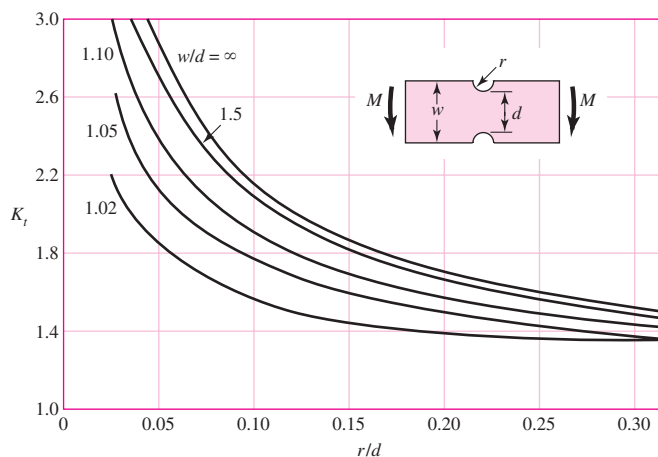
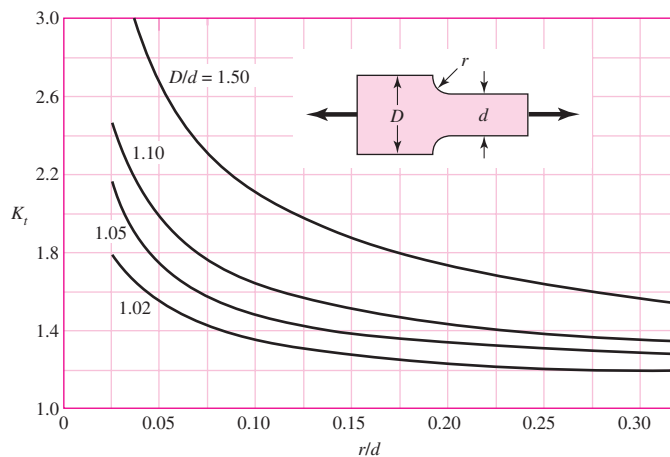


Table A-15Charts of Theoretical Stress-Concentration Factors K_t^* (Continued)**Figure A-15-4**

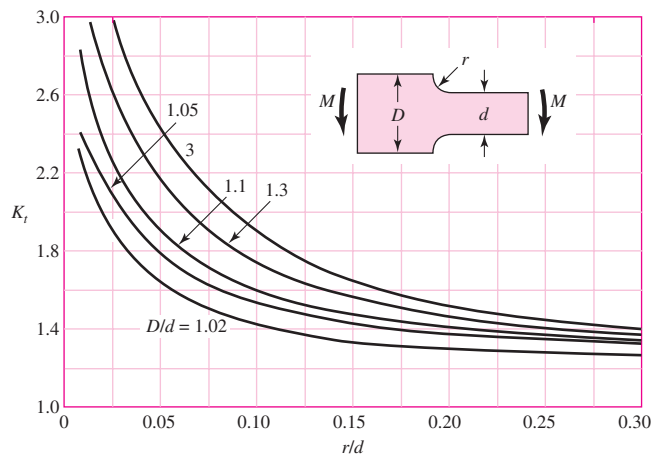
Notched rectangular bar in bending. $\sigma_0 = Mc/I$, where $c = d/2$, $I = td^3/12$, and t is the thickness.

**Figure A-15-5**

Rectangular filleted bar in tension or simple compression. $\sigma_0 = F/A$, where $A = dt$ and t is the thickness.

**Figure A-15-6**

Rectangular filleted bar in bending. $\sigma_0 = Mc/I$, where $c = d/2$, $I = td^3/12$, t is the thickness.



(continued)

*Factors from R. E. Peterson, "Design Factors for Stress Concentration," Machine Design, vol. 23, no. 2, February 1951, p. 169; no. 3, March 1951, p. 161, no. 5, May 1951, p. 159; no. 6, June 1951, p. 173; no. 7, July 1951, p. 155. Reprinted with permission from Machine Design, a Penton Media Inc. publication.

Table A-15

Charts of Theoretical Stress-Concentration Factors K_t^* (Continued)

Figure A-15-7

Round shaft with shoulder fillet
in tension. $\sigma_0 = F/A$, where
 $A = \pi d^2/4$.

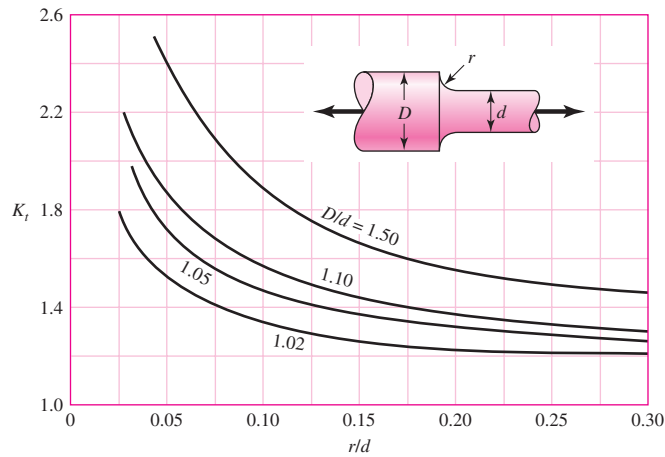


Figure A-15-8

Round shaft with shoulder fillet
in torsion. $\tau_0 = Tc/J$, where
 $c = d/2$ and $J = \pi d^4/32$.

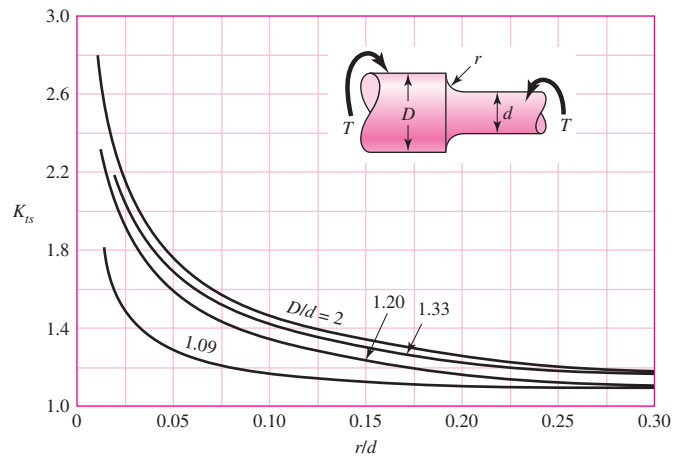


Figure A-15-9

Round shaft with shoulder fillet
in bending. $\sigma_0 = Mc/I$, where
 $c = d/2$ and $I = \pi d^4/64$.

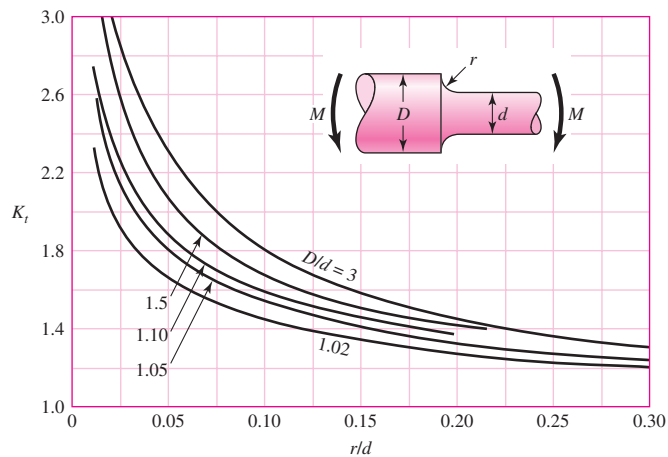


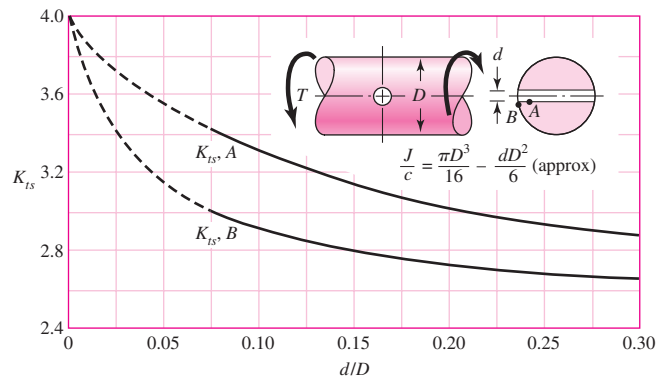
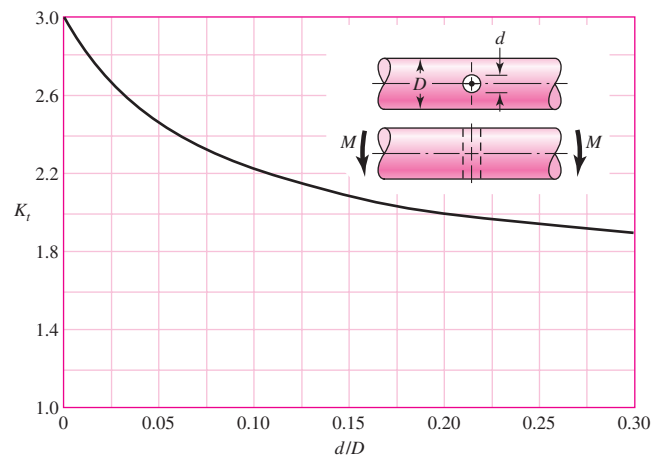
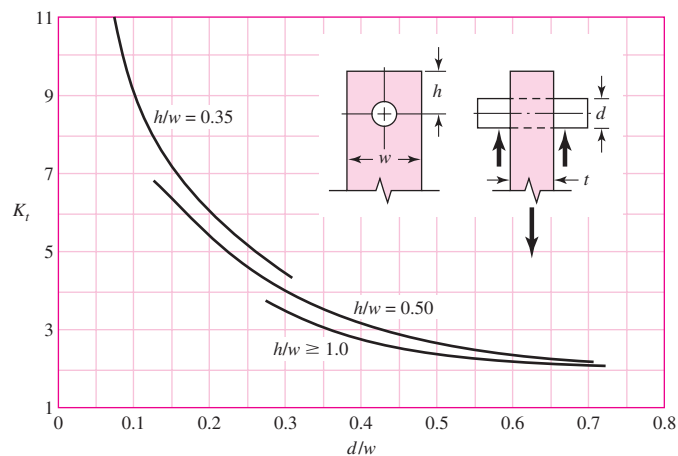
Table A-15Charts of Theoretical Stress-Concentration Factors K_t^* (Continued)**Figure A-15-10**Round shaft in torsion with
a transverse hole.**Figure A-15-11**Round shaft in bending with
a transverse hole. $\sigma_0 =$
 $M/[(\pi D^3/32) - (dD^2/6)]$,
approximately.**Figure A-15-12**

Plate loaded in tension by a
pin through a hole. $\sigma_0 = F/A$,
where $A = (w - d)t$. When
clearance exists, increase K_t
35 to 50 percent. (M. M.
Frocht and H. N. Hill, "Stress
Concentration Factors around
a Central Circular Hole in a
Plate Loaded through a Pin in
Hole," *J. Appl. Mechanics*,
vol. 7, no. 1, March 1940,
p. A-5.)



(continued)

Table A-15

Charts of Theoretical Stress-Concentration Factors K_t^* (Continued)

Figure A-15-13

Grooved round bar in tension.
 $\sigma_0 = F/A$, where
 $A = \pi d^2/4$.

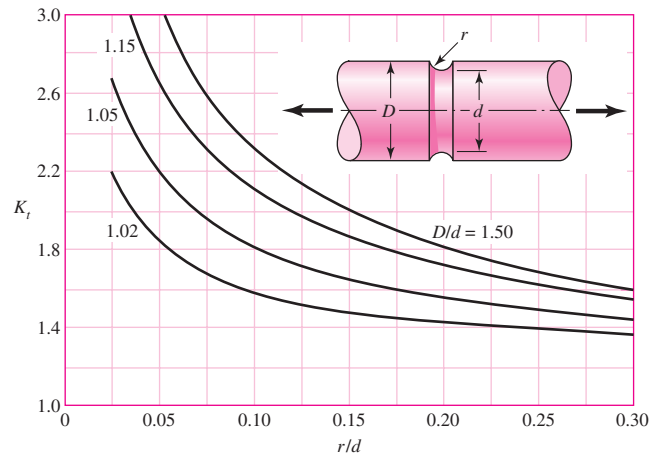


Figure A-15-14

Grooved round bar in bending. $\sigma_0 = Mc/I$, where
 $c = d/2$ and $I = \pi d^4/64$.

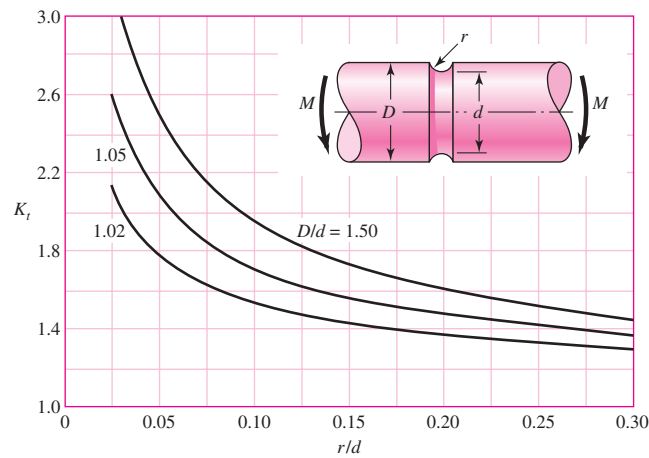
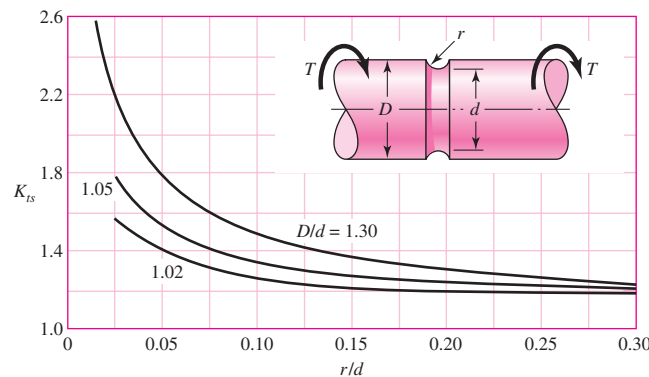


Figure A-15-15

Grooved round bar in torsion.
 $\tau_0 = Tc/J$, where $c = d/2$
and $J = \pi d^4/32$.



*Factors from R. E. Peterson, "Design Factors for Stress Concentration," Machine Design, vol. 23, no. 2, February 1951, p. 169; no. 3, March 1951, p. 161, no. 5, May 1951, p. 159; no. 6, June 1951, p. 173; no. 7, July 1951, p. 155. Reprinted with permission from Machine Design, a Penton Media Inc. publication.

Table A-15Charts of Theoretical Stress-Concentration Factors K_t^* (Continued)**Figure A-15-16**

Round shaft with
flat-bottom groove in
bending and/or tension.

$$\sigma_0 = \frac{4P}{\pi d^2} + \frac{32M}{\pi d^3}$$

Source: W. D. Pilkey, *Peterson's
Stress Concentration Factors*,
2nd ed. John Wiley & Sons,
New York, 1997, p. 115

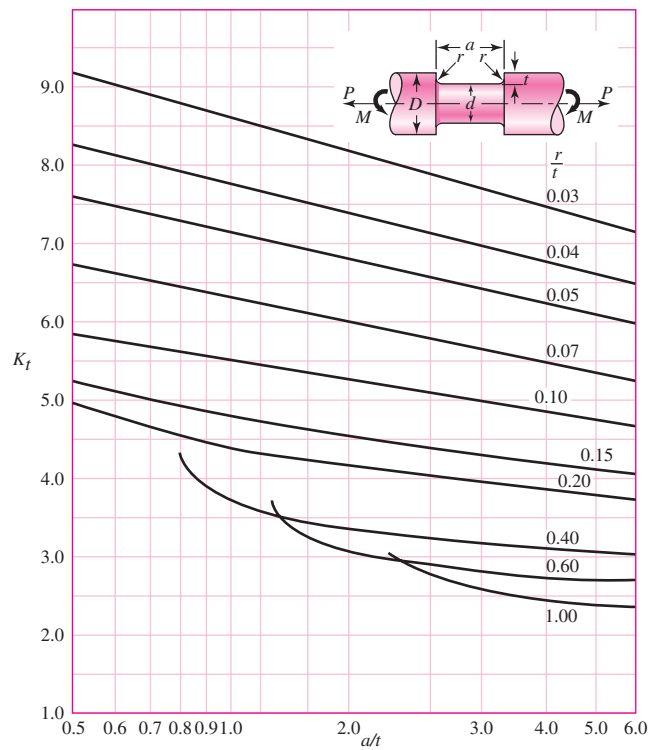


Table A-15

Charts of Theoretical Stress-Concentration Factors K_t^* (Continued)

Figure A-15-17

Round shaft with flat-bottom groove in torsion.

$$\tau_0 = \frac{16T}{\pi d^3}$$

Source: W. D. Pilkey, *Peterson's Stress Concentration Factors*, 2nd ed. John Wiley & Sons, New York, 1997, p. 133

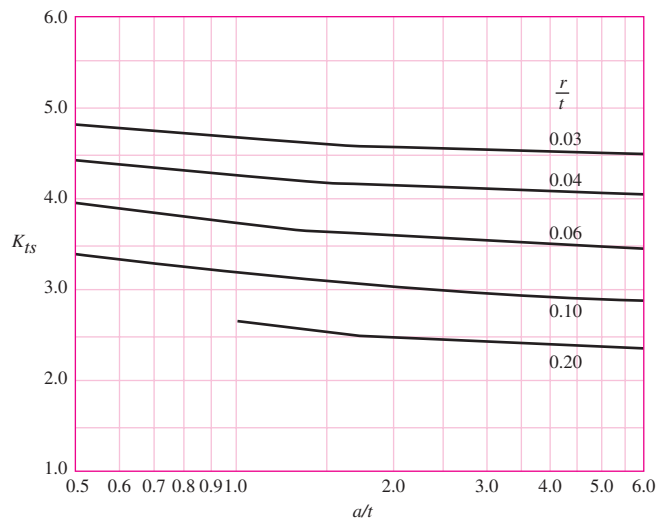
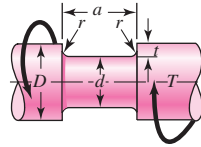
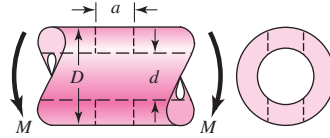


Table A-16

Approximate Stress-Concentration Factor K_t for Bending of a Round Bar or Tube with a Transverse Round Hole

Source: R. E. Peterson, *Stress Concentration Factors*, Wiley, New York, 1974, pp. 146, 235.



The nominal bending stress is $\sigma_0 = M/Z_{\text{net}}$ where Z_{net} is a reduced value of the section modulus and is defined by

$$Z_{\text{net}} = \frac{\pi A}{32D}(D^4 - d^4)$$

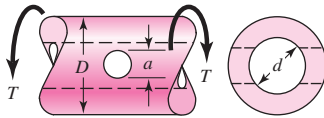
Values of A are listed in the table. Use $d = 0$ for a solid bar

a/D	d/D					
	0.9		0.6		0	
	A	K_t	A	K_t	A	K_t
0.050	0.92	2.63	0.91	2.55	0.88	2.42
0.075	0.89	2.55	0.88	2.43	0.86	2.35
0.10	0.86	2.49	0.85	2.36	0.83	2.27
0.125	0.82	2.41	0.82	2.32	0.80	2.20
0.15	0.79	2.39	0.79	2.29	0.76	2.15
0.175	0.76	2.38	0.75	2.26	0.72	2.10
0.20	0.73	2.39	0.72	2.23	0.68	2.07
0.225	0.69	2.40	0.68	2.21	0.65	2.04
0.25	0.67	2.42	0.64	2.18	0.61	2.00
0.275	0.66	2.48	0.61	2.16	0.58	1.97
0.30	0.64	2.52	0.58	2.14	0.54	1.94

(continued)

Table A-16 (Continued)

Approximate Stress-Concentration Factors K_{ts} for a Round Bar or Tube Having a Transverse Round Hole and Loaded in Torsion Source: R. E. Peterson, *Stress Concentration Factors*, Wiley, New York, 1974, pp. 148, 244.



The maximum stress occurs on the inside of the hole, slightly below the shaft surface. The nominal shear stress is $\tau_0 = TD/2J_{net}$, where J_{net} is a reduced value of the second polar moment of area and is defined by

$$J_{net} = \frac{\pi A(D^4 - d^4)}{32}$$

Values of A are listed in the table. Use $d = 0$ for a solid bar.

a/D	d/D									
	0.9		0.8		0.6		0.4		0	
	A	K_{ts}	A	K_{ts}	A	K_{ts}	A	K_{ts}	A	K_{ts}
0.05	0.96	1.78							0.95	1.77
0.075	0.95	1.82							0.93	1.71
0.10	0.94	1.76	0.93	1.74	0.92	1.72	0.92	1.70	0.92	1.68
0.125	0.91	1.76	0.91	1.74	0.90	1.70	0.90	1.67	0.89	1.64
0.15	0.90	1.77	0.89	1.75	0.87	1.69	0.87	1.65	0.87	1.62
0.175	0.89	1.81	0.88	1.76	0.87	1.69	0.86	1.64	0.85	1.60
0.20	0.88	1.96	0.86	1.79	0.85	1.70	0.84	1.63	0.83	1.58
0.25	0.87	2.00	0.82	1.86	0.81	1.72	0.80	1.63	0.79	1.54
0.30	0.80	2.18	0.78	1.97	0.77	1.76	0.75	1.63	0.74	1.51
0.35	0.77	2.41	0.75	2.09	0.72	1.81	0.69	1.63	0.68	1.47
0.40	0.72	2.67	0.71	2.25	0.68	1.89	0.64	1.63	0.63	1.44

Table A-17

Preferred Sizes and Renard (R-Series) Numbers
(When a choice can be made, use one of these sizes; however, not all parts or items are available in all the sizes shown in the table.)

Fraction of Inches

$\frac{1}{64}, \frac{1}{32}, \frac{1}{16}, \frac{3}{32}, \frac{1}{8}, \frac{5}{32}, \frac{3}{16}, \frac{1}{4}, \frac{5}{16}, \frac{3}{8}, \frac{7}{16}, \frac{1}{2}, \frac{9}{16}, \frac{5}{8}, \frac{11}{16}, \frac{3}{4}, \frac{7}{8}, 1, 1\frac{1}{4}, 1\frac{1}{2}, 1\frac{3}{4}, 2, 2\frac{1}{4}, 2\frac{1}{2}, 2\frac{3}{4}, 3, 3\frac{1}{4}, 3\frac{1}{2}, 3\frac{3}{4}, 4, 4\frac{1}{4}, 4\frac{1}{2}, 4\frac{3}{4}, 5, 5\frac{1}{4}, 5\frac{1}{2}, 5\frac{3}{4}, 6, 6\frac{1}{2}, 7, 7\frac{1}{2}, 8, 8\frac{1}{2}, 9, 9\frac{1}{2}, 10, 10\frac{1}{2}, 11, 11\frac{1}{2}, 12, 12\frac{1}{2}, 13, 13\frac{1}{2}, 14, 14\frac{1}{2}, 15, 15\frac{1}{2}, 16, 16\frac{1}{2}, 17, 17\frac{1}{2}, 18, 18\frac{1}{2}, 19, 19\frac{1}{2}, 20$

Decimal Inches

0.010, 0.012, 0.016, 0.020, 0.025, 0.032, 0.040, 0.05, 0.06, 0.08, 0.10, 0.12, 0.16, 0.20, 0.24, 0.30, 0.40, 0.50, 0.60, 0.80, 1.00, 1.20, 1.40, 1.60, 1.80, 2.0, 2.4, 2.6, 2.8, 3.0, 3.2, 3.4, 3.6, 3.8, 4.0, 4.2, 4.4, 4.6, 4.8, 5.0, 5.2, 5.4, 5.6, 5.8, 6.0, 7.0, 7.5, 8.5, 9.0, 9.5, 10.0, 10.5, 11.0, 11.5, 12.0, 12.5, 13.0, 13.5, 14.0, 14.5, 15.0, 15.5, 16.0, 16.5, 17.0, 17.5, 18.0, 18.5, 19.0, 19.5, 20

Millimeters

0.05, 0.06, 0.08, 0.10, 0.12, 0.16, 0.20, 0.25, 0.30, 0.40, 0.50, 0.60, 0.70, 0.80, 0.90, 1.0, 1.1, 1.2, 1.4, 1.5, 1.6, 1.8, 2.0, 2.2, 2.5, 2.8, 3.0, 3.5, 4.0, 4.5, 5.0, 5.5, 6.0, 6.5, 7.0, 8.0, 9.0, 10, 11, 12, 14, 16, 18, 20, 22, 25, 28, 30, 32, 35, 40, 45, 50, 60, 80, 100, 120, 140, 160, 180, 200, 250, 300

Renard Numbers*

1st choice, R5: 1, 1.6, 2.5, 4, 6.3, 10

2d choice, R10: 1.25, 2, 3.15, 5, 8

3d choice, R20: 1.12, 1.4, 1.8, 2.24, 2.8, 3.55, 4.5, 5.6, 7.1, 9

4th choice, R40: 1.06, 1.18, 1.32, 1.5, 1.7, 1.9, 2.12, 2.36, 2.65, 3, 3.35, 3.75, 4.25, 4.75, 5.3, 6, 6.7, 7.5, 8.5, 9.5

*May be multiplied or divided by powers of 10.

Table A-18

Geometric Properties

Part 1 Properties of Sections

A = area

G = location of centroid

$$I_x = \int y^2 dA = \text{second moment of area about } x \text{ axis}$$

$$I_y = \int x^2 dA = \text{second moment of area about } y \text{ axis}$$

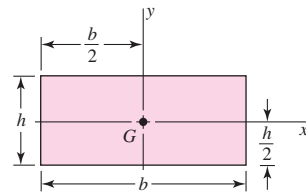
$$I_{xy} = \int xy dA = \text{mixed moment of area about } x \text{ and } y \text{ axes}$$

$$J_G = \int r^2 dA = \int (x^2 + y^2) dA = I_x + I_y$$

= second polar moment of area about axis through G

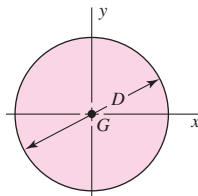
$$k_x^2 = I_x/A = \text{squared radius of gyration about } x \text{ axis}$$

Rectangle



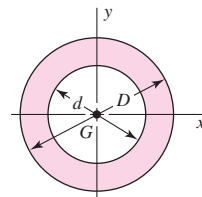
$$A = bh \quad I_x = \frac{bh^3}{12} \quad I_y = \frac{b^3h}{12} \quad I_{xy} = 0$$

Circle

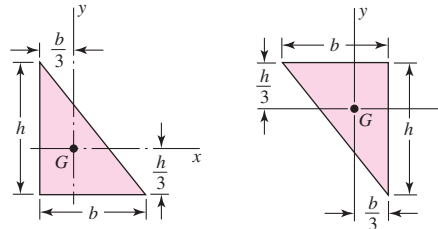


$$A = \frac{\pi D^2}{4} \quad I_x = I_y = \frac{\pi D^4}{64} \quad I_{xy} = 0 \quad J_G = \frac{\pi D^4}{32}$$

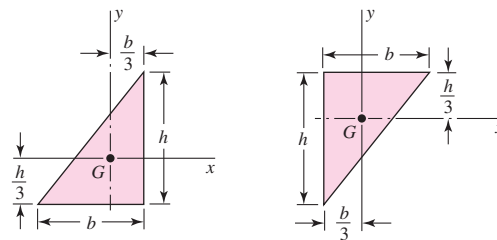
Hollow circle



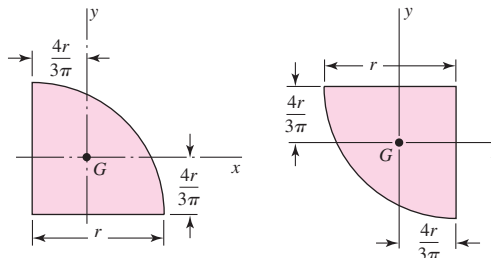
$$A = \frac{\pi}{4}(D^2 - d^2) \quad I_x = I_y = \frac{\pi}{64}(D^4 - d^4) \quad I_{xy} = 0 \quad J_G = \frac{\pi}{32}(D^4 - d^4)$$

Table A-18Geometric Properties
(Continued)**Right triangles**

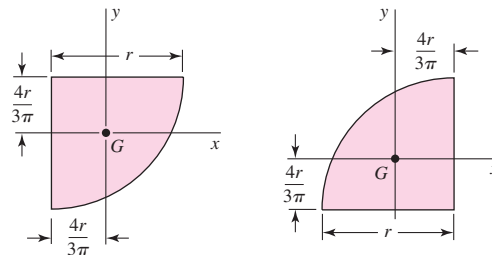
$$A = \frac{bh}{2} \quad I_x = \frac{bh^3}{36} \quad I_y = \frac{b^3h}{36} \quad I_{xy} = \frac{-b^2h^2}{72}$$

Right triangles

$$A = \frac{bh}{2} \quad I_x = \frac{bh^3}{36} \quad I_y = \frac{b^3h}{36} \quad I_{xy} = \frac{b^2h^2}{72}$$

Quarter-circles

$$A = \frac{\pi r^2}{4} \quad I_x = I_y = r^4 \left(\frac{\pi}{16} - \frac{4}{9\pi} \right) \quad I_{xy} = r^4 \left(\frac{1}{8} - \frac{4}{9\pi} \right)$$

Quarter-circles

$$A = \frac{\pi r^2}{4} \quad I_x = I_y = r^4 \left(\frac{\pi}{16} - \frac{4}{9\pi} \right) \quad I_{xy} = r^4 \left(\frac{4}{9\pi} - \frac{1}{8} \right)$$

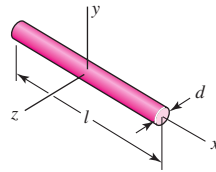
(continued)

Table A-18

Geometric Properties
(Continued)

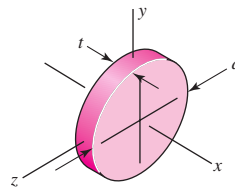
Part 2 Properties of Solids ($\rho =$ Density, Weight per Unit Volume)

Rods



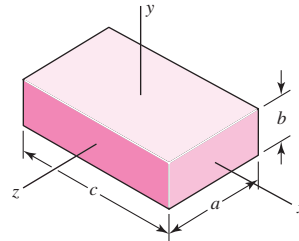
$$m = \frac{\pi d^2 l \rho}{4g} \quad I_y = I_z = \frac{ml^2}{12}$$

Round disks



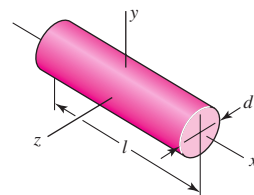
$$m = \frac{\pi d^2 t \rho}{4g} \quad I_x = \frac{md^2}{8} \quad I_y = I_z = \frac{md^2}{16}$$

Rectangular prisms



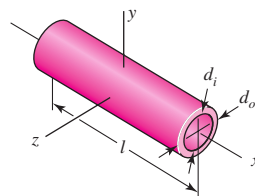
$$m = \frac{abc\rho}{g} \quad I_x = \frac{m}{12}(a^2 + b^2) \quad I_y = \frac{m}{12}(a^2 + c^2) \quad I_z = \frac{m}{12}(b^2 + c^2)$$

Cylinders



$$m = \frac{\pi d^2 l \rho}{4g} \quad I_x = \frac{md^2}{8} \quad I_y = I_z = \frac{m}{48}(3d^2 + 4l^2)$$

Hollow cylinders



$$m = \frac{\pi (d_o^2 - d_i^2) l \rho}{4g} \quad I_x = \frac{m}{8} (d_o^2 + d_i^2) \quad I_y = I_z = \frac{m}{48} (3d_o^2 + 3d_i^2 + 4l^2)$$

Table A-19

American Standard Pipe

Nominal Size, in	Outside Diameter, in	Threads per inch	Wall Thickness, in		
			Standard No. 40	Extra Strong No. 80	Double Extra Strong
$\frac{1}{8}$	0.405	27	0.070	0.098	
$\frac{1}{4}$	0.540	18	0.090	0.122	
$\frac{3}{8}$	0.675	18	0.093	0.129	
$\frac{1}{2}$	0.840	14	0.111	0.151	0.307
$\frac{3}{4}$	1.050	14	0.115	0.157	0.318
1	1.315	$11\frac{1}{2}$	0.136	0.183	0.369
$1\frac{1}{4}$	1.660	$11\frac{1}{2}$	0.143	0.195	0.393
$1\frac{1}{2}$	1.900	$11\frac{1}{2}$	0.148	0.204	0.411
2	2.375	$11\frac{1}{2}$	0.158	0.223	0.447
$2\frac{1}{2}$	2.875	8	0.208	0.282	0.565
3	3.500	8	0.221	0.306	0.615
$3\frac{1}{2}$	4.000	8	0.231	0.325	
4	4.500	8	0.242	0.344	0.690
5	5.563	8	0.263	0.383	0.768
6	6.625	8	0.286	0.441	0.884
8	8.625	8	0.329	0.510	0.895

Table A-20

Deterministic ASTM Minimum Tensile and Yield Strengths for Some Hot-Rolled (HR) and Cold-Drawn (CD) Steels [The strengths listed are estimated ASTM minimum values in the size range 18 to 32 mm ($\frac{3}{4}$ to $1\frac{1}{4}$ in). These strengths are suitable for use with the design factor defined in Sec. 1–10, provided the materials conform to ASTM A6 or A568 requirements or are required in the purchase specifications. Remember that a numbering system is not a specification.] *Source:* 1986 SAE Handbook, p. 2.15.

1	2	3	4	5	6	7	8
UNS No.	SAE and/or AISI No.	Process- ing	Tensile Strength, MPa (kpsi)	Yield Strength, MPa (kpsi)	Elongation in 2 in, %	Reduction in Area, %	Brinell Hardness
G10060	1006	HR	300 (43)	170 (24)	30	55	86
		CD	330 (48)	280 (41)	20	45	95
G10100	1010	HR	320 (47)	180 (26)	28	50	95
		CD	370 (53)	300 (44)	20	40	105
G10150	1015	HR	340 (50)	190 (27.5)	28	50	101
		CD	390 (56)	320 (47)	18	40	111
G10180	1018	HR	400 (58)	220 (32)	25	50	116
		CD	440 (64)	370 (54)	15	40	126
G10200	1020	HR	380 (55)	210 (30)	25	50	111
		CD	470 (68)	390 (57)	15	40	131
G10300	1030	HR	470 (68)	260 (37.5)	20	42	137
		CD	520 (76)	440 (64)	12	35	149
G10350	1035	HR	500 (72)	270 (39.5)	18	40	143
		CD	550 (80)	460 (67)	12	35	163
G10400	1040	HR	520 (76)	290 (42)	18	40	149
		CD	590 (85)	490 (71)	12	35	170
G10450	1045	HR	570 (82)	310 (45)	16	40	163
		CD	630 (91)	530 (77)	12	35	179
G10500	1050	HR	620 (90)	340 (49.5)	15	35	179
		CD	690 (100)	580 (84)	10	30	197
G10600	1060	HR	680 (98)	370 (54)	12	30	201
G10800	1080	HR	770 (112)	420 (61.5)	10	25	229
G10950	1095	HR	830 (120)	460 (66)	10	25	248

Table A-21

Mean Mechanical Properties of Some Heat-Treated Steels

[These are typical properties for materials normalized and annealed. The properties for quenched and tempered (Q&T) steels are from a single heat. Because of the many variables, the properties listed are global averages. In all cases, data were obtained from specimens of diameter 0.505 in, machined from 1-in rounds, and of gauge length 2 in. unless noted, all specimens were oil-quenched.] *Source: ASM Metals Reference Book, 2d ed., American Society for Metals, Metals Park, Ohio, 1983.*

1	2	3	4	5	6	7	8
AISI No.	Treatment	Temperature °C (°F)	Tensile	Yield	Elongation, %	Reduction in Area, %	Brinell Hardness
			Strength MPa (kpsi)	Strength, MPa (kpsi)			
1030	Q&T*	205 (400)	848 (123)	648 (94)	17	47	495
	Q&T*	315 (600)	800 (116)	621 (90)	19	53	401
	Q&T*	425 (800)	731 (106)	579 (84)	23	60	302
	Q&T*	540 (1000)	669 (97)	517 (75)	28	65	255
	Q&T*	650 (1200)	586 (85)	441 (64)	32	70	207
	Normalized	925 (1700)	521 (75)	345 (50)	32	61	149
	Annealed	870 (1600)	430 (62)	317 (46)	35	64	137
1040	Q&T	205 (400)	779 (113)	593 (86)	19	48	262
	Q&T	425 (800)	758 (110)	552 (80)	21	54	241
	Q&T	650 (1200)	634 (92)	434 (63)	29	65	192
	Normalized	900 (1650)	590 (86)	374 (54)	28	55	170
	Annealed	790 (1450)	519 (75)	353 (51)	30	57	149
1050	Q&T*	205 (400)	1120 (163)	807 (117)	9	27	514
	Q&T*	425 (800)	1090 (158)	793 (115)	13	36	444
	Q&T*	650 (1200)	717 (104)	538 (78)	28	65	235
	Normalized	900 (1650)	748 (108)	427 (62)	20	39	217
	Annealed	790 (1450)	636 (92)	365 (53)	24	40	187
1060	Q&T	425 (800)	1080 (156)	765 (111)	14	41	311
	Q&T	540 (1000)	965 (140)	669 (97)	17	45	277
	Q&T	650 (1200)	800 (116)	524 (76)	23	54	229
	Normalized	900 (1650)	776 (112)	421 (61)	18	37	229
	Annealed	790 (1450)	626 (91)	372 (54)	22	38	179
1095	Q&T	315 (600)	1260 (183)	813 (118)	10	30	375
	Q&T	425 (800)	1210 (176)	772 (112)	12	32	363
	Q&T	540 (1000)	1090 (158)	676 (98)	15	37	321
	Q&T	650 (1200)	896 (130)	552 (80)	21	47	269
	Normalized	900 (1650)	1010 (147)	500 (72)	9	13	293
	Annealed	790 (1450)	658 (95)	380 (55)	13	21	192
1141	Q&T	315 (600)	1460 (212)	1280 (186)	9	32	415
	Q&T	540 (1000)	896 (130)	765 (111)	18	57	262

(continued)

Table A-21 (Continued)

Mean Mechanical Properties of Some Heat-Treated Steels

[These are typical properties for materials normalized and annealed. The properties for quenched and tempered (Q&T) steels are from a single heat. Because of the many variables, the properties listed are global averages. In all cases, data were obtained from specimens of diameter 0.505 in, machined from 1-in rounds, and of gauge length 2 in. Unless noted, all specimens were oil-quenched.] Source: *ASM Metals Reference Book*, 2d ed., American Society for Metals, Metals Park, Ohio, 1983.

1	2	3	4	5	6	7	8
AISI No.	Treatment	Temperature °C (°F)	Tensile	Yield	Elongation, %	Reduction in Area, %	Brinell Hardness
			Strength MPa (kpsi)	Strength, MPa (kpsi)			
4130	Q&T*	205 (400)	1630 (236)	1460 (212)	10	41	467
	Q&T*	315 (600)	1500 (217)	1380 (200)	11	43	435
	Q&T*	425 (800)	1280 (186)	1190 (173)	13	49	380
	Q&T*	540 (1000)	1030 (150)	910 (132)	17	57	315
	Q&T*	650 (1200)	814 (118)	703 (102)	22	64	245
	Normalized	870 (1600)	670 (97)	436 (63)	25	59	197
	Annealed	865 (1585)	560 (81)	361 (52)	28	56	156
4140	Q&T	205 (400)	1770 (257)	1640 (238)	8	38	510
	Q&T	315 (600)	1550 (225)	1430 (208)	9	43	445
	Q&T	425 (800)	1250 (181)	1140 (165)	13	49	370
	Q&T	540 (1000)	951 (138)	834 (121)	18	58	285
	Q&T	650 (1200)	758 (110)	655 (95)	22	63	230
	Normalized	870 (1600)	1020 (148)	655 (95)	18	47	302
	Annealed	815 (1500)	655 (95)	417 (61)	26	57	197
4340	Q&T	315 (600)	1720 (250)	1590 (230)	10	40	486
	Q&T	425 (800)	1470 (213)	1360 (198)	10	44	430
	Q&T	540 (1000)	1170 (170)	1080 (156)	13	51	360
	Q&T	650 (1200)	965 (140)	855 (124)	19	60	280

*Water-quenched

Table A-22

Results of Tensile Tests of Some Metals* Source: J. Datsko, "Solid Materials," chap. 32 in Joseph E. Shigley, Charles R. Mischke, and Thomas H. Brown, Jr. (eds.-in-chief), *Standard Handbook of Machine Design*, 3rd ed., McGraw-Hill, New York, 2004, pp. 32.49–32.52.

Number	Material	Condition	Strength (Tensile)					
			Yield S_y MPa (kpsi)	Ultimate S_u MPa (kpsi)	Fracture, σ_f MPa (kpsi)	Coefficient σ_o MPa (kpsi)	Strain Strength, Exponent m	Fracture Strain ϵ_f
1018	Steel	Annealed	220 (32.0)	341 (49.5)	628 (91.1) [†]	620 (90.0)	0.25	1.05
1144	Steel	Annealed	358 (52.0)	646 (93.7)	898 (130) [†]	992 (144)	0.14	0.49
1212	Steel	HR	193 (28.0)	424 (61.5)	729 (106) [†]	758 (110)	0.24	0.85
1045	Steel	G&T 600°F	1520 (220)	1580 (230)	2380 (345)	1880 (273) [†]	0.041	0.81
4142	Steel	G&T 600°F	1720 (250)	1930 (210)	2340 (340)	1760 (255) [†]	0.048	0.43
303	Stainless steel	Annealed	241 (35.0)	601 (87.3)	1520 (221) [†]	1410 (205)	0.51	1.16
304	Stainless steel	Annealed	276 (40.0)	568 (82.4)	1600 (233) [†]	1270 (185)	0.45	1.67
2011	Aluminum alloy	T6	169 (24.5)	324 (47.0)	325 (47.2) [†]	620 (90)	0.28	0.10
2024	Aluminum alloy	T4	296 (43.0)	446 (64.8)	533 (77.3) [†]	689 (100)	0.15	0.18
7075	Aluminum alloy	T6	542 (78.6)	593 (86.0)	706 (102) [†]	882 (128)	0.13	0.18

*Values from one or two heats and believed to be attainable using proper purchase specifications. The fracture strain may vary as much as 100 percent.

[†]Derived value.

Mean Monotonic and Cyclic Stress-Strain Properties of Selected Steels Source: ASM Metals Reference Book, 2nd ed., American Society for Metals, Metals Park, Ohio, 1983, p. 217.

Budynas-Nisbett: Shigley's Mechanical Engineering Design, Eighth Edition

Grade (a)	Orientation (e)	Description (f)	Hardness		Tensile		Reduction in Area (%)	True Strain at Fracture ϵ_f	Modulus of Elasticity E		Fatigue Strength Coefficient σ'_f		Fatigue Strength Exponent b		Fatigue Ductility Coefficient ϵ'_F		Fatigue Ductility Exponent c	
			HB	HR	MPa	ksi			GPa	10 ⁶ psi	MPa	ksi	ksi	MPa	ksi	ksi	MPa	ksi
A538A (b)	L	STA	405		1515	220	67	1.10	185	27	1655	240	-0.065	0.30	-0.62			
A538B (b)	L	STA	460		1860	270	56	0.82	185	27	2135	310	-0.071	0.80	-0.71			
A538C (b)	L	STA	480		2000	290	55	0.81	180	26	2240	325	-0.07	0.60	-0.75			
AM-350 (c)	L	HR, A			1315	191	52	0.74	195	28	2800	406	-0.14	0.33	-0.84			
AM-350 (c)	L	CD	496		1905	276	20	0.23	180	26	2690	390	-0.102	0.10	-0.42			
Gainex (c)	LT	HR sheet			530	77	58	0.86	200	29.2	805	117	-0.07	0.86	-0.65			
Gainex (c)	L	HR sheet			510	74	64	1.02	200	29.2	805	117	-0.071	0.86	-0.68			
H-11	L	Ausformed	660		2585	375	33	0.40	205	30	3170	460	-0.077	0.08	-0.74			
RQC-100 (c)	LT	HR plate	290		940	136	43	0.56	205	30	1240	180	-0.07	0.66	-0.69			
RQC-100 (c)	L	HR plate	290		930	135	67	1.02	205	30	1240	180	-0.07	0.66	-0.69			
10B62	L	Q&T	430		1640	238	38	0.89	195	28	1780	258	-0.067	0.32	-0.56			
1005-1009	LT	HR sheet	90		360	52	73	1.3	205	30	580	84	-0.09	0.15	-0.43			
1005-1009	LT	CD sheet	125		470	68	66	1.09	205	30	515	75	-0.059	0.30	-0.51			
1005-1009	L	CD sheet	125		415	60	64	1.02	200	29	540	78	-0.073	0.11	-0.41			
1005-1009	L	HR sheet	90		345	50	80	1.6	200	29	640	93	-0.109	0.10	-0.39			
1015	L	Normalized	80		415	60	68	1.14	205	30	825	120	-0.11	0.95	-0.64			
1020	L	HR plate	108		440	64	62	0.96	205	29.5	895	130	-0.12	0.41	-0.51			
1040	L	As forged	225		620	90	60	0.93	200	29	1540	223	-0.14	0.61	-0.57			
1045	L	Q&T	225		725	105	65	1.04	200	29	1225	178	-0.095	1.00	-0.66			
1045	L	Q&T	410		1450	210	51	0.72	200	29	1860	270	-0.073	0.60	-0.70			
1045	L	Q&T	390		1345	195	59	0.89	205	30	1585	230	-0.074	0.45	-0.68			
1045	L	Q&T	450		1585	230	55	0.81	205	30	1795	260	-0.07	0.35	-0.69			
1045	L	Q&T	500		1825	265	51	0.71	205	30	2275	330	-0.08	0.25	-0.68			
1045	L	Q&T	595		2240	325	41	0.52	205	30	2725	395	-0.081	0.07	-0.60			
1144	L	CDSR	265		930	135	33	0.51	195	28.5	1000	145	-0.08	0.32	-0.58			

1144	L	DAT	305	1035	150	25	0.29	200	28.8	1585	230	-0.09	0.27	-0.53
1541F	L	Q&T forging	290	950	138	49	0.68	205	29.9	1275	185	-0.076	0.68	-0.65
1541F	L	Q&T forging	260	890	129	60	0.93	205	29.9	1275	185	-0.071	0.93	-0.65
4130	L	Q&T	258	895	130	67	1.12	220	32	1275	185	-0.083	0.92	-0.63
4130	L	Q&T	365	1425	207	55	0.79	200	29	1695	246	-0.081	0.89	-0.69
4140	L	Q&T, DAT	310	1075	156	60	0.69	200	29.2	1825	265	-0.08	1.2	-0.59
4142	L	DAT	310	1060	154	29	0.35	200	29	1450	210	-0.10	0.22	-0.51
4142	L	DAT	335	1250	181	28	0.34	200	28.9	1250	181	-0.08	0.06	-0.62
4142	L	Q&T	380	1415	205	48	0.66	205	30	1825	265	-0.08	0.45	-0.75
4142	L	Q&T and deformed	400	1550	225	47	0.63	200	29	1895	275	-0.09	0.50	-0.75
4142	L	Q&T	450	1760	255	42	0.54	205	30	2000	290	-0.08	0.40	-0.73
4142	L	Q&T and deformed	475	2035	295	20	0.22	200	29	2070	300	-0.082	0.20	-0.77
4142	L	Q&T and deformed	450	1930	280	37	0.46	200	29	2105	305	-0.09	0.60	-0.76
4142	L	Q&T	475	1930	280	35	0.43	205	30	2170	315	-0.081	0.09	-0.61
4142	L	Q&T	560	2240	325	27	0.31	205	30	2655	385	-0.089	0.07	-0.76
4340	L	HR, A	243	825	120	43	0.57	195	28	1200	174	-0.095	0.45	-0.54
4340	L	Q&T	409	1470	213	38	0.48	200	29	2000	290	-0.091	0.48	-0.60
4340	L	Q&T	350	1240	180	57	0.84	195	28	1655	240	-0.076	0.73	-0.62
5160	L	Q&T	430	1670	242	42	0.87	195	28	1930	280	-0.071	0.40	-0.57
52100	L	SH, Q&T	518	2015	292	11	0.12	205	30	2585	375	-0.09	0.18	-0.56
9262	L	A	260	925	134	14	0.16	205	30	1040	151	-0.071	0.16	-0.47
9262	L	Q&T	280	1000	145	33	0.41	195	28	1220	177	-0.073	0.41	-0.60
9262	L	Q&T	410	565	227	32	0.38	200	29	1855	269	-0.057	0.38	-0.65
950C (d)	LT	HR plate	159	565	82	64	1.03	205	29.6	1170	170	-0.12	0.95	-0.61
950C (d)	L	HR bar	150	565	82	69	1.19	205	30	970	141	-0.11	0.85	-0.59
950X (d)	L	Plate channel	150	440	64	65	1.06	205	30	625	91	-0.075	0.35	-0.54
950X (d)	L	HR plate	156	530	77	72	1.24	205	29.5	1005	146	-0.10	0.85	-0.61
950X (d)	L	Plate channel	225	695	101	68	1.15	195	28.2	1055	153	-0.08	0.21	-0.53

Notes: (a) AISI/SAE grade, unless otherwise indicated. (b) ASTM designation. (c) Proprietary designation. (d) SAE HSLA grade. (e) Orientation of axis of specimen, relative to rolling direction; L is longitudinal (parallel to rolling direction); LT is long transverse (perpendicular to rolling direction). (f) STA, solution treated and aged; HR, hot rolled; CD, cold drawn; Q&T, quenched and tempered; CDSR, cold drawn strain relieved; DAT, drawn at temperature; A, annealed. From *ASM Metals Reference Book, 2nd edition, 1983*; ASM International, Materials Park, OH 44073-0002; table 217. Reprinted by permission of ASM International ©, www.asminternational.org.

Table A-24

Mechanical Properties of Three Non-Steel Metals

(a) Typical Properties of Gray Cast Iron

[The American Society for Testing and Materials (ASTM) numbering system for gray cast iron is such that the numbers correspond to the *minimum tensile strength* in kpsi. Thus an ASTM No. 20 cast iron has a minimum tensile strength of 20 kpsi. Note particularly that the tabulations are *typical* of several heats.]

ASTM Number	Tensile Strength		Compressive Strength		Shear Modulus of Rupture		Modulus of Elasticity, Mpsi		Endurance Limit*		Brinell Hardness		Fatigue Stress-Concentration Factor	
	S_{utr} kpsi	S_{ucr} kpsi	S_{ucr} kpsi	S_{sur} kpsi	Tension†	Torsion	S_e kpsi	H_B	K_f					
20	22	83	26	9.6–14	3.9–5.6	10	156	1.00						
25	26	97	32	11.5–14.8	4.6–6.0	11.5	174	1.05						
30	31	109	40	13–16.4	5.2–6.6	14	201	1.10						
35	36.5	124	48.5	14.5–17.2	5.8–6.9	16	212	1.15						
40	42.5	140	57	16–20	6.4–7.8	18.5	235	1.25						
50	52.5	164	73	18.8–22.8	7.2–8.0	21.5	262	1.35						
60	62.5	187.5	88.5	20.4–23.5	7.8–8.5	24.5	302	1.50						

*Polished or machined specimens.

†The modulus of elasticity of cast iron in compression corresponds closely to the upper value in the range given for tension and is a more constant value than that for tension.

Table A-24Mechanical Properties of Three Non-Steel Metals (*Continued*)

(b) Mechanical Properties of Some Aluminum Alloys

[These are typical properties for sizes of about $\frac{1}{2}$ in; similar properties can be obtained by using proper purchase specifications. The values given for fatigue strength correspond to $50(10^7)$ cycles of completely reversed stress. Aluminum alloys do not have an endurance limit. Yield strengths were obtained by the 0.2 percent offset method.]

Aluminum Association Number	Temper	Strength			Elongation in 2 in, %	Brinell Hardness H_B
		Yield, S_y , MPa (kpsi)	Tensile, S_{ut} , MPa (kpsi)	Fatigue, S_f , MPa (kpsi)		
Wrought:						
2017	O	70 (10)	179 (26)	90 (13)	22	45
2024	O	76 (11)	186 (27)	90 (13)	22	47
	T3	345 (50)	482 (70)	138 (20)	16	120
3003	H12	117 (17)	131 (19)	55 (8)	20	35
	H16	165 (24)	179 (26)	65 (9.5)	14	47
3004	H34	186 (27)	234 (34)	103 (15)	12	63
	H38	234 (34)	276 (40)	110 (16)	6	77
5052	H32	186 (27)	234 (34)	117 (17)	18	62
	H36	234 (34)	269 (39)	124 (18)	10	74
Cast:						
319.0*	T6	165 (24)	248 (36)	69 (10)	2.0	80
333.0†	T5	172 (25)	234 (34)	83 (12)	1.0	100
	T6	207 (30)	289 (42)	103 (15)	1.5	105
335.0*	T6	172 (25)	241 (35)	62 (9)	3.0	80
	T7	248 (36)	262 (38)	62 (9)	0.5	85

*Sand casting.

†Permanent-mold casting.

(c) Mechanical Properties of Some Titanium Alloys

Titanium Alloy	Condition	Yield, S_y (0.2% offset) MPa (kpsi)	Strength Tensile, S_{ut} MPa (kpsi)	Elongation in 2 in, %	Hardness (Brinell or Rockwell)
Ti-35A†	Annealed	210 (30)	275 (40)	30	135 HB
Ti-50A†	Annealed	310 (45)	380 (55)	25	215 HB
Ti-0.2 Pd	Annealed	280 (40)	340 (50)	28	200 HB
Ti-5 Al-2.5 Sn	Annealed	760 (110)	790 (115)	16	36 HRC
Ti-8 Al-1 Mo-1 V	Annealed	900 (130)	965 (140)	15	39 HRC
Ti-6 Al-6 V-2 Sn	Annealed	970 (140)	1030 (150)	14	38 HRC
Ti-6Al-4V	Annealed	830 (120)	900 (130)	14	36 HRC
Ti-13 V-11 Cr-3 Al	Sol. + aging	1207 (175)	1276 (185)	8	40 HRC

†Commercially pure alpha titanium

Table A-25

Stochastic Yield and Ultimate Strengths for Selected Materials Source: Data compiled from "Some Property Data and Corresponding Weibull Parameters for Stochastic Mechanical Design," Trans. ASME Journal of Mechanical Design, vol. 114 (March 1992), pp. 29-34.

Material	μ_{Sut}	$\hat{\sigma}_{Sut}$	x_0	θ	b	μ_{Sy}	$\hat{\sigma}_{Sy}$	x_0	θ	b	C_{Sut}	C_{Sy}
1018	87.6	5.74	30.8	90.1	12	78.4	5.90	56	80.6	4.29	0.0655	0.0753
1035	86.2	3.92	72.6	87.5	3.86	49.6	3.81	39.5	50.8	2.88	0.0455	0.0768
1045	117.7	7.13	90.2	120.5	4.38	95.5	6.59	82.1	97.2	2.14	0.0606	0.0690
1117	83.1	5.25	73.0	84.4	2.01	81.4	4.71	72.4	82.6	2.00	0.0632	0.0579
1137	106.5	6.15	96.2	107.7	1.72	98.1	4.24	92.2	98.7	1.41	0.0577	0.0432
12L14	79.6	6.92	70.3	80.4	1.36	78.1	8.27	64.3	78.8	1.72	0.0869	0.1059
1038	133.4	3.38	122.3	134.6	3.64						0.0253	
ASTM40	44.5	4.34	27.7	46.2	4.38						0.0975	
35018	53.3	1.59	48.7	53.8	3.18	38.5	1.42	34.7	39.0	2.93	0.0298	0.0369
32510	53.4	2.68	44.7	54.3	3.61	34.9	1.47	30.1	35.5	3.67	0.0502	0.0421
Malleable	93.9	3.83	80.1	95.3	4.04	60.2	2.78	50.2	61.2	4.02	0.0408	0.0462
604515	64.8	3.77	53.7	66.1	3.23	49.0	4.20	33.8	50.5	4.06	0.0582	0.0857
1007004	122.2	7.65	47.6	125.6	11.84	79.3	4.51	64.1	81.0	3.77	0.0626	0.0569
201SS	195.9	7.76	180.7	197.9	2.06						0.0396	
301SS	191.2	5.82	151.9	193.6	8.00	166.8	9.37	139.7	170.0	3.17	0.0304	0.0562
304SS	105.0	5.68	92.3	106.6	2.38	46.8	4.70	26.3	48.7	4.99	0.0541	0.1004
310SS	84.8	4.14	66.6	86.6	5.11	37.9	3.76	30.2	38.9	2.17	0.0487	0.0992
403SS	84.8	4.23	71.6	86.3	3.45						0.0499	
17-7PSS	105.3	3.09	95.7	106.4	3.44	78.5	3.91	64.8	79.9	3.93	0.0293	0.0498
AM350SS	198.8	9.51	163.3	202.3	4.21	189.4	11.49	144.0	193.8	4.48	0.0478	0.0607
Ti-6AL-4V	149.1	8.29	101.8	152.4	6.68	63.0	5.05	38.0	65.0	5.73	0.0556	0.0802
2024	175.4	7.91	141.8	178.5	4.85	163.7	9.03	101.5	167.4	8.18	0.0451	0.0552
2024	28.1	1.73	24.2	28.7	2.43						0.0616	
2024	64.9	1.64	60.2	65.5	3.16	40.8	1.83	38.4	41.0	1.32	0.0253	0.0449
7075	67.5	1.50	55.9	68.1	9.26	53.4	1.17	51.2	53.6	1.91	0.0222	0.0219
7075	75.5	2.10	68.8	76.2	3.53	63.7	1.98	58.9	64.3	2.63	0.0278	0.0311

Table A-26

Stochastic Parameters for Finite Life Fatigue Tests in Selected Metals Source: E. B. Haugen, *Probabilistic Mechanical Design*, Wiley, New York, 1980, Appendix 10-B.

1	2	3	4	5	6	7	8	9
Number	Condition	TS MPa (kpsi)	YS MPa (kpsi)	Distri- bution	10^4	10^5	10^6	10^7
1046	WQ&T, 1210°F	723 (105)	565 (82)	W x_0	544 (79)	462 (67)	391 (56.7)	
				θ	594 (86.2)	503 (73.0)	425 (61.7)	
				b	2.60	2.75	2.85	
2340	OQ&T 1200°F	799 (116)	661 (96)	W x_0	579 (84)	510 (74)	420 (61)	
				θ	699 (101.5)	588 (85.4)	496 (72.0)	
				b	4.3	3.4	4.1	
3140	OQ&T, 1300°F	744 (108)	599 (87)	W x_0	510 (74)	455 (66)	393 (57)	
				θ	604 (87.7)	528 (76.7)	463 (67.2)	
				b	5.2	5.0	5.5	
2024	T4	489 (71)	365 (53)	N σ	26.3 (3.82)	21.4 (3.11)	17.4 (2.53)	14.0 (2.03)
Aluminum				μ	143 (20.7)	116 (16.9)	95 (13.8)	77 (11.2)
Ti-6Al-4V	HT-46	1040 (151)	992 (144)	N σ	39.6 (5.75)	38.1 (5.53)	36.6 (5.31)	35.1 (5.10)
				μ	712 (108)	684 (99.3)	657 (95.4)	493 (71.6)

Statistical parameters from a large number of fatigue tests are listed. Weibull distribution is denoted W and the parameters are x_0 , "guaranteed" fatigue strength; θ , characteristic fatigue strength; and b , slope factor. Normal distribution is denoted N and the parameters are μ , mean fatigue strength; and σ , standard deviation of the fatigue strength. The life is in stress-cycles-to-failure. TS = tensile strength, YS = yield strength. All testing by rotating-beam specimen.

Table A-27

Finite Life Fatigue Strengths of Selected Plain Carbon Steels Source: Compiled from Table 4 in H. J. Grover, S. A. Gordon, and L. R. Jackson, *Fatigue of Metals and Structures*, Bureau of Naval Weapons Document NAVWEPS 00-25-534, 1960.

Material	Condition	BHN*	Strength		RA*	Stress Cycles to Failure								
			Tensile Strength kpsi	Yield Strength kpsi		10 ⁴	4(10 ⁴)	10 ⁵	4(10 ⁵)	10 ⁶	4(10 ⁶)	10 ⁷	10 ⁸	
1020	Furnace cooled		58	30	0.63			37	34	30	28	25		
1030	Aircooled	135	80	45	0.62		51	47	42	38	38	38		
1035	Normal	132	72	35	0.54			44	40	37	34	33		33
	WQT	209	103	87	0.65		80	72	65	60	57	57		57
1040	Forged	195	92	53	0.23				40	47	33	33		
1045	HR, N		107	63	0.49		70	56	47	47	47	47		
1050	N, AC	164	92	47	0.40		48	46	40	38	34	34		
	WQT													
	1200	196	97	70	0.58		60	57	52	50	50	50		50
.56 MN	N	193	98	47	0.42		55	51	47	43	41	41		41
	WQT	277	111	84	0.57		81	73	62	57	55	55		55
	1200													
1060	As Rec.	67 Rb	134	65	0.20		60	55	50	48	48	48		
1095		162	84	33	0.37		43	40	34	31	30	30		30
	OQT	227	115	65	0.40		68	64	57	56	56	56		56
	1200													
10120		224	117	59	0.12		60	56	51	50	50	50		50
	OQT	369	180	130	0.15		102	95	91	91	91	91		91
	860													

*BHN = Brinell hardness number; RA = fractional reduction in area.

Table A-28

Decimal Equivalents of Wire and Sheet-Metal Gauges* (All Sizes Are Given in Inches)

Name of Gauge:	American or Brown & Sharpe	Birmingham or Stubs Iron Wire	United States Standard†	Manu- facturers Standard	Steel Wire or Washburn & Moen	Music Wire	Stubs Steel Wire	Twist Drill
	Nonferrous Sheet, Wire, and Rod	Tubing, Ferrous Strip, Flat Wire, and Spring Steel	Ferrous Sheet and Plate, 480 lbf/ft ³	Ferrous Sheet	Ferrous Wire Except Music Wire	Music Wire	Steel Drill Rod	Twist Drills and Drill Steel
7/0			0.500		0.490			
6/0	0.580 0		0.468 75		0.461 5	0.004		
5/0	0.516 5		0.437 5		0.430 5	0.005		
4/0	0.460 0	0.454	0.406 25		0.393 8	0.006		
3/0	0.409 6	0.425	0.375		0.362 5	0.007		
2/0	0.364 8	0.380	0.343 75		0.331 0	0.008		
0	0.324 9	0.340	0.312 5		0.306 5	0.009		
1	0.289 3	0.300	0.281 25		0.283 0	0.010	0.227	0.228 0
2	0.257 6	0.284	0.265 625		0.262 5	0.011	0.219	0.221 0
3	0.229 4	0.259	0.25	0.239 1	0.243 7	0.012	0.212	0.213 0
4	0.204 3	0.238	0.234 375	0.224 2	0.225 3	0.013	0.207	0.209 0
5	0.181 9	0.220	0.218 75	0.209 2	0.207 0	0.014	0.204	0.205 5
6	0.162 0	0.203	0.203 125	0.194 3	0.192 0	0.016	0.201	0.204 0
7	0.144 3	0.180	0.187 5	0.179 3	0.177 0	0.018	0.199	0.201 0
8	0.128 5	0.165	0.171 875	0.164 4	0.162 0	0.020	0.197	0.199 0
9	0.114 4	0.148	0.156 25	0.149 5	0.148 3	0.022	0.194	0.196 0
10	0.101 9	0.134	0.140 625	0.134 5	0.135 0	0.024	0.191	0.193 5
11	0.090 74	0.120	0.125	0.119 6	0.120 5	0.026	0.188	0.191 0
12	0.080 81	0.109	0.109 357	0.104 6	0.105 5	0.029	0.185	0.189 0
13	0.071 96	0.095	0.093 75	0.089 7	0.091 5	0.031	0.182	0.185 0
14	0.064 08	0.083	0.078 125	0.074 7	0.080 0	0.033	0.180	0.182 0
15	0.057 07	0.072	0.070 312 5	0.067 3	0.072 0	0.035	0.178	0.180 0
16	0.050 82	0.065	0.062 5	0.059 8	0.062 5	0.037	0.175	0.177 0
17	0.045 26	0.058	0.056 25	0.053 8	0.054 0	0.039	0.172	0.173 0

(continued)

Table A-28

Decimal Equivalents of Wire and Sheet-Metal Gauges* (All Sizes Are Given in Inches) (Continued)

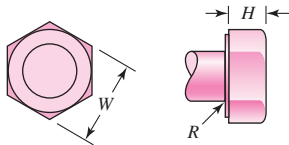
Name of Gauge:	American or Brown & Sharpe	Birmingham or Stubs Iron Wire	United States Standard [†]	Steel Wire or Washburn & Moen		Music Wire	Stubs Steel Wire	Twist Drills and Drill Steel
				Manu- facturers Standard	Ferrous Wire Except Music Wire			
Principal Use:	Nonferrous Sheet, Wire, and Rod	Tubing, Ferrous Strip, Flat Wire, and Spring Steel	Ferrous Sheet and Plate, 480 lbf/ft ³	Ferrous Sheet	Ferrous Wire Except Music Wire	Music Wire	Steel Drill Rod	Twist Drills and Drill Steel
18	0.040 30	0.049	0.05	0.047 8	0.047 5	0.041	0.168	0.169 5
19	0.035 89	0.042	0.043 75	0.041 8	0.041 0	0.043	0.164	0.166 0
20	0.031 96	0.035	0.037 5	0.035 9	0.034 8	0.045	0.161	0.161 0
21	0.028 46	0.032	0.034 375	0.032 9	0.031 7	0.047	0.157	0.159 0
22	0.025 35	0.028	0.031 25	0.029 9	0.028 6	0.049	0.155	0.157 0
23	0.022 57	0.025	0.028 125	0.026 9	0.025 8	0.051	0.153	0.154 0
24	0.020 10	0.022	0.025	0.023 9	0.023 0	0.055	0.151	0.152 0
25	0.017 90	0.020	0.021 875	0.020 9	0.020 4	0.059	0.148	0.149 5
26	0.015 94	0.018	0.018 75	0.017 9	0.018 1	0.063	0.146	0.147 0
27	0.014 20	0.016	0.017 187 5	0.016 4	0.017 3	0.067	0.143	0.144 0
28	0.012 64	0.014	0.015 625	0.014 9	0.016 2	0.071	0.139	0.140 5
29	0.011 26	0.013	0.014 062 5	0.013 5	0.015 0	0.075	0.134	0.136 0
30	0.010 03	0.012	0.012 5	0.012 0	0.014 0	0.080	0.127	0.128 5
31	0.008 928	0.010	0.010 937 5	0.010 5	0.013 2	0.085	0.120	0.120 0
32	0.007 950	0.009	0.010 156 25	0.009 7	0.012 8	0.090	0.115	0.116 0
33	0.007 080	0.008	0.009 375	0.009 0	0.011 8	0.095	0.112	0.113 0
34	0.006 305	0.007	0.008 593 75	0.008 2	0.010 4		0.110	0.111 0
35	0.005 615	0.005	0.007 812 5	0.007 5	0.009 5		0.108	0.110 0
36	0.005 000	0.004	0.007 031 25	0.006 7	0.009 0		0.106	0.106 5
37	0.004 453		0.006 640 625	0.006 4	0.008 5		0.103	0.104 0
38	0.003 965		0.006 25	0.006 0	0.008 0		0.101	0.101 5
39	0.003 531			0.007 5	0.007 5		0.099	0.099 5
40	0.003 145			0.007 0	0.007 0		0.097	0.098 0

*Specify sheet, wire, and plate by stating the gauge number, the gauge name, and the decimal equivalent in parentheses.

[†]Reflects present average and weights of sheet steel.

Table A-29

Dimensions of Square and Hexagonal Bolts



Nominal Size, in	Head Type										
	Square		Regular Hexagonal			Heavy Hexagonal			Structural Hexagonal		
	W	H	W	H	R_{\min}	W	H	R_{\min}	W	H	R_{\min}
$\frac{1}{4}$	$\frac{3}{8}$	$\frac{11}{64}$	$\frac{7}{16}$	$\frac{11}{64}$	0.01						
$\frac{5}{16}$	$\frac{1}{2}$	$\frac{13}{64}$	$\frac{1}{2}$	$\frac{7}{32}$	0.01						
$\frac{3}{8}$	$\frac{9}{16}$	$\frac{1}{4}$	$\frac{9}{16}$	$\frac{1}{4}$	0.01						
$\frac{7}{16}$	$\frac{5}{8}$	$\frac{19}{64}$	$\frac{5}{8}$	$\frac{19}{64}$	0.01						
$\frac{1}{2}$	$\frac{3}{4}$	$\frac{21}{64}$	$\frac{3}{4}$	$\frac{11}{32}$	0.01	$\frac{7}{8}$	$\frac{11}{32}$	0.01	$\frac{7}{8}$	$\frac{5}{16}$	0.009
$\frac{5}{8}$	$\frac{15}{16}$	$\frac{27}{64}$	$\frac{15}{16}$	$\frac{27}{64}$	0.02	$1\frac{1}{16}$	$\frac{27}{64}$	0.02	$1\frac{1}{16}$	$\frac{25}{64}$	0.021
$\frac{3}{4}$	$1\frac{1}{8}$	$\frac{1}{2}$	$1\frac{1}{8}$	$\frac{1}{2}$	0.02	$1\frac{1}{4}$	$\frac{1}{2}$	0.02	$1\frac{1}{4}$	$\frac{15}{32}$	0.021
1	$1\frac{1}{2}$	$\frac{21}{32}$	$1\frac{1}{2}$	$\frac{43}{64}$	0.03	$1\frac{5}{8}$	$\frac{43}{64}$	0.03	$1\frac{5}{8}$	$\frac{39}{64}$	0.062
$1\frac{1}{8}$	$1\frac{11}{16}$	$\frac{3}{4}$	$1\frac{11}{16}$	$\frac{3}{4}$	0.03	$1\frac{13}{16}$	$\frac{3}{4}$	0.03	$1\frac{13}{16}$	$\frac{11}{16}$	0.062
$1\frac{1}{4}$	$1\frac{7}{8}$	$\frac{27}{32}$	$1\frac{7}{8}$	$\frac{27}{32}$	0.03	2	$\frac{27}{32}$	0.03	2	$\frac{25}{32}$	0.062
$1\frac{3}{8}$	$2\frac{1}{16}$	$\frac{29}{32}$	$2\frac{1}{16}$	$\frac{29}{32}$	0.03	$2\frac{3}{16}$	$\frac{29}{32}$	0.03	$2\frac{3}{16}$	$\frac{27}{32}$	0.062
$1\frac{1}{2}$	$2\frac{1}{4}$	1	$2\frac{1}{4}$	1	0.03	$2\frac{3}{8}$	1	0.03	$2\frac{3}{8}$	$\frac{15}{16}$	0.062
Nominal Size, mm											
M5	8	3.58	8	3.58	0.2						
M6			10	4.38	0.3						
M8			13	5.68	0.4						
M10			16	6.85	0.4						
M12			18	7.95	0.6	21	7.95	0.6			
M14			21	9.25	0.6	24	9.25	0.6			
M16			24	10.75	0.6	27	10.75	0.6	27	10.75	0.6
M20			30	13.40	0.8	34	13.40	0.8	34	13.40	0.8
M24			36	15.90	0.8	41	15.90	0.8	41	15.90	1.0
M30			46	19.75	1.0	50	19.75	1.0	50	19.75	1.2
M36			55	23.55	1.0	60	23.55	1.0	60	23.55	1.5

Table A-30

Dimensions of Hexagonal Cap Screws and Heavy Hexagonal Screws (W = Width across Flats; H = Height of Head; See Figure in Table A-29)

Nominal Size, in	Minimum Fillet Radius	Type of Screw		
		Cap W	Heavy W	Height H
$\frac{1}{4}$	0.015	$\frac{7}{16}$		$\frac{5}{32}$
$\frac{5}{16}$	0.015	$\frac{1}{2}$		$\frac{13}{64}$
$\frac{3}{8}$	0.015	$\frac{9}{16}$		$\frac{15}{64}$
$\frac{7}{16}$	0.015	$\frac{5}{8}$		$\frac{9}{32}$
$\frac{1}{2}$	0.015	$\frac{3}{4}$	$\frac{7}{8}$	$\frac{5}{16}$
$\frac{5}{8}$	0.020	$\frac{15}{16}$	$1\frac{1}{16}$	$\frac{25}{64}$
$\frac{3}{4}$	0.020	$1\frac{1}{8}$	$1\frac{1}{4}$	$\frac{15}{32}$
$\frac{7}{8}$	0.040	$1\frac{5}{16}$	$1\frac{7}{16}$	$\frac{35}{64}$
1	0.060	$1\frac{1}{2}$	$1\frac{1}{8}$	$\frac{39}{64}$
$1\frac{1}{4}$	0.060	$1\frac{7}{8}$	2	$\frac{25}{32}$
$1\frac{3}{8}$	0.060	$2\frac{1}{16}$	$2\frac{3}{16}$	$\frac{27}{32}$
$1\frac{1}{2}$	0.060	$2\frac{1}{4}$	$2\frac{3}{8}$	$\frac{15}{16}$

Nominal Size, mm				
M5	0.2	8		3.65
M6	0.3	10		4.15
M8	0.4	13		5.50
M10	0.4	16		6.63
M12	0.6	18	21	7.76
M14	0.6	21	24	9.09
M16	0.6	24	27	10.32
M20	0.8	30	34	12.88
M24	0.8	36	41	15.44
M30	1.0	46	50	19.48
M36	1.0	55	60	23.38

Table A-31Dimensions of
Hexagonal Nuts

Nominal Size, in	Width W	Height H		
		Regular Hexagonal	Thick or Slotted	JAM
$\frac{1}{4}$	$\frac{7}{16}$	$\frac{7}{32}$	$\frac{9}{32}$	$\frac{5}{32}$
$\frac{5}{16}$	$\frac{1}{2}$	$\frac{17}{64}$	$\frac{21}{64}$	$\frac{3}{16}$
$\frac{3}{8}$	$\frac{9}{16}$	$\frac{21}{64}$	$\frac{13}{32}$	$\frac{7}{32}$
$\frac{7}{16}$	$\frac{11}{16}$	$\frac{3}{8}$	$\frac{29}{64}$	$\frac{1}{4}$
$\frac{1}{2}$	$\frac{3}{4}$	$\frac{7}{16}$	$\frac{9}{16}$	$\frac{5}{16}$
$\frac{9}{16}$	$\frac{7}{8}$	$\frac{31}{64}$	$\frac{39}{64}$	$\frac{5}{16}$
$\frac{5}{8}$	$\frac{15}{16}$	$\frac{35}{64}$	$\frac{23}{32}$	$\frac{3}{8}$
$\frac{3}{4}$	$1\frac{1}{8}$	$\frac{41}{64}$	$\frac{13}{16}$	$\frac{27}{64}$
$\frac{7}{8}$	$1\frac{5}{16}$	$\frac{3}{4}$	$\frac{29}{32}$	$\frac{31}{64}$
1	$1\frac{1}{2}$	$\frac{55}{64}$	1	$\frac{35}{64}$
$1\frac{1}{8}$	$1\frac{11}{16}$	$\frac{31}{32}$	$1\frac{5}{32}$	$\frac{39}{64}$
$1\frac{1}{4}$	$1\frac{7}{8}$	$1\frac{1}{16}$	$1\frac{1}{4}$	$\frac{23}{32}$
$1\frac{3}{8}$	$2\frac{1}{16}$	$1\frac{11}{64}$	$1\frac{3}{8}$	$\frac{25}{32}$
$1\frac{1}{2}$	$2\frac{1}{4}$	$1\frac{9}{32}$	$1\frac{1}{2}$	$\frac{27}{32}$
Nominal Size, mm				
M5	8	4.7	5.1	2.7
M6	10	5.2	5.7	3.2
M8	13	6.8	7.5	4.0
M10	16	8.4	9.3	5.0
M12	18	10.8	12.0	6.0
M14	21	12.8	14.1	7.0
M16	24	14.8	16.4	8.0
M20	30	18.0	20.3	10.0
M24	36	21.5	23.9	12.0
M30	46	25.6	28.6	15.0
M36	55	31.0	34.7	18.0

Table A-32

Basic Dimensions of
American Standard
Plain Washers (All
Dimensions in Inches)

Fastener Size	Washer Size	Diameter		
		ID	OD	Thickness
#6	0.138	0.156	0.375	0.049
#8	0.164	0.188	0.438	0.049
#10	0.190	0.219	0.500	0.049
#12	0.216	0.250	0.562	0.065
$\frac{1}{4}$ N	0.250	0.281	0.625	0.065
$\frac{1}{4}$ W	0.250	0.312	0.734	0.065
$\frac{5}{16}$ N	0.312	0.344	0.688	0.065
$\frac{5}{16}$ W	0.312	0.375	0.875	0.083
$\frac{3}{8}$ N	0.375	0.406	0.812	0.065
$\frac{3}{8}$ W	0.375	0.438	1.000	0.083
$\frac{7}{16}$ N	0.438	0.469	0.922	0.065
$\frac{7}{16}$ W	0.438	0.500	1.250	0.083
$\frac{1}{2}$ N	0.500	0.531	1.062	0.095
$\frac{1}{2}$ W	0.500	0.562	1.375	0.109
$\frac{9}{16}$ N	0.562	0.594	1.156	0.095
$\frac{9}{16}$ W	0.562	0.625	1.469	0.109
$\frac{5}{8}$ N	0.625	0.656	1.312	0.095
$\frac{5}{8}$ W	0.625	0.688	1.750	0.134
$\frac{3}{4}$ N	0.750	0.812	1.469	0.134
$\frac{3}{4}$ W	0.750	0.812	2.000	0.148
$\frac{7}{8}$ N	0.875	0.938	1.750	0.134
$\frac{7}{8}$ W	0.875	0.938	2.250	0.165
1 N	1.000	1.062	2.000	0.134
1 W	1.000	1.062	2.500	0.165
$1\frac{1}{8}$ N	1.125	1.250	2.250	0.134
$1\frac{1}{8}$ W	1.125	1.250	2.750	0.165
$1\frac{1}{4}$ N	1.250	1.375	2.500	0.165
$1\frac{1}{4}$ W	1.250	1.375	3.000	0.165
$1\frac{3}{8}$ N	1.375	1.500	2.750	0.165
$1\frac{3}{8}$ W	1.375	1.500	3.250	0.180
$1\frac{1}{2}$ N	1.500	1.625	3.000	0.165
$1\frac{1}{2}$ W	1.500	1.625	3.500	0.180
$1\frac{5}{8}$ N	1.625	1.750	3.750	0.180
$1\frac{3}{4}$ N	1.750	1.875	4.000	0.180
$1\frac{7}{8}$ N	1.875	2.000	4.250	0.180
2	2.000	2.125	4.500	0.180
$2\frac{1}{4}$	2.250	2.375	4.750	0.220
$2\frac{1}{2}$	2.500	2.625	5.000	0.238
$2\frac{3}{4}$	2.750	2.875	5.250	0.259
3	3.000	3.125	5.500	0.284

N = narrow; W = wide; use W when not specified.

Table A-33

Dimensions of Metric Plain Washers (All Dimensions in Millimeters)

Washer Size*	Minimum ID	Maximum OD	Maximum Thickness	Washer Size*	Minimum ID	Maximum OD	Maximum Thickness
1.6 N	1.95	4.00	0.70	10 N	10.85	20.00	2.30
1.6 R	1.95	5.00	0.70	10 R	10.85	28.00	2.80
1.6 W	1.95	6.00	0.90	10 W	10.85	39.00	3.50
2 N	2.50	5.00	0.90	12 N	13.30	25.40	2.80
2 R	2.50	6.00	0.90	12 R	13.30	34.00	3.50
2 W	2.50	8.00	0.90	12 W	13.30	44.00	3.50
2.5 N	3.00	6.00	0.90	14 N	15.25	28.00	2.80
2.5 R	3.00	8.00	0.90	14 R	15.25	39.00	3.50
2.5 W	3.00	10.00	1.20	14 W	15.25	50.00	4.00
3 N	3.50	7.00	0.90	16 N	17.25	32.00	3.50
3 R	3.50	10.00	1.20	16 R	17.25	44.00	4.00
3 W	3.50	12.00	1.40	16 W	17.25	56.00	4.60
3.5 N	4.00	9.00	1.20	20 N	21.80	39.00	4.00
3.5 R	4.00	10.00	1.40	20 R	21.80	50.00	4.60
3.5 W	4.00	15.00	1.75	20 W	21.80	66.00	5.10
4 N	4.70	10.00	1.20	24 N	25.60	44.00	4.60
4 R	4.70	12.00	1.40	24 R	25.60	56.00	5.10
4 W	4.70	16.00	2.30	24 W	25.60	72.00	5.60
5 N	5.50	11.00	1.40	30 N	32.40	56.00	5.10
5 R	5.50	15.00	1.75	30 R	32.40	72.00	5.60
5 W	5.50	20.00	2.30	30 W	32.40	90.00	6.40
6 N	6.65	13.00	1.75	36 N	38.30	66.00	5.60
6 R	6.65	18.80	1.75	36 R	38.30	90.00	6.40
6 W	6.65	25.40	2.30	36 W	38.30	110.00	8.50
8 N	8.90	18.80	2.30				
8 R	8.90	25.40	2.30				
8 W	8.90	32.00	2.80				

N = narrow; R = regular; W = wide.

*Same as screw or bolt size.

Table A-34

Gamma Function*

Source: Reprinted with permission from William H. Beyer (ed.), *Handbook of Tables for Probability and Statistics*, 2nd ed., 1966. Copyright CRC Press, Boca Raton, Florida.

$$\text{Values of } \Gamma(n) = \int_0^{\infty} e^{-x} x^{n-1} dx; \Gamma(n+1) = n\Gamma(n)$$

n	Γ(n)	n	Γ(n)	n	Γ(n)	n	Γ(n)
1.00	1.000 00	1.25	.906 40	1.50	.886 23	1.75	.919 06
1.01	.994 33	1.26	.904 40	1.51	.886 59	1.76	.921 37
1.02	.988 84	1.27	.902 50	1.52	.887 04	1.77	.923 76
1.03	.983 55	1.28	.900 72	1.53	.887 57	1.78	.926 23
1.04	.978 44	1.29	.899 04	1.54	.888 18	1.79	.928 77
1.05	.973 50	1.30	.897 47	1.55	.888 87	1.80	.931 38
1.06	.968 74	1.31	.896 00	1.56	.889 64	1.81	.934 08
1.07	.964 15	1.32	.894 64	1.57	.890 49	1.82	.936 85
1.08	.959 73	1.33	.893 38	1.58	.891 42	1.83	.939 69
1.09	.955 46	1.34	.892 22	1.59	.892 43	1.84	.942 61
1.10	.951 35	1.35	.891 15	1.60	.893 52	1.85	.945 61
1.11	.947 39	1.36	.890 18	1.61	.894 68	1.86	.948 69
1.12	.943 59	1.37	.889 31	1.62	.895 92	1.87	.951 84
1.13	.939 93	1.38	.888 54	1.63	.897 24	1.88	.955 07
1.14	.936 42	1.39	.887 85	1.64	.898 64	1.89	.958 38
1.15	.933 04	1.40	.887 26	1.65	.900 12	1.90	.961 77
1.16	.929 80	1.41	.886 76	1.66	.901 67	1.91	.965 23
1.17	.936 70	1.42	.886 36	1.67	.903 30	1.92	.968 78
1.18	.923 73	1.43	.886 04	1.68	.905 00	1.93	.972 40
1.19	.920 88	1.44	.885 80	1.69	.906 78	1.94	.976 10
1.20	.918 17	1.45	.885 65	1.70	.908 64	1.95	.979 88
1.21	.915 58	1.46	.885 60	1.71	.910 57	1.96	.983 74
1.22	.913 11	1.47	.885 63	1.72	.912 58	1.97	.987 68
1.23	.910 75	1.48	.885 75	1.73	.914 66	1.98	.991 71
1.24	.908 52	1.49	.885 95	1.74	.916 83	1.99	.995 81
						2.00	1.000 00

*For large positive values of x , $\Gamma(x)$ approximates the asymptotic series

$$x^x e^{-x} \sqrt{\frac{2x}{x}} \left[1 + \frac{1}{12x} + \frac{1}{288x^2} - \frac{139}{51\,840x^3} - \frac{571}{2\,488\,320x^4} + \dots \right]$$

Answers to Selected Problems

Appendix **B****B-1 Chapter 1**

- 1-5** (a) 1368 cars/h, (b) loss of throughput = 12%,
(c) increase in speed = 5.5%
- 1-8** (a) $e_1 = 0.006\ 067\ 977$, $e_2 = 0.009\ 489\ 743$,
 $e = 0.015\ 557\ 720$, (b) $e_1 = -0.003\ 932\ 023$,
 $e_2 = -0.000\ 510\ 257$, $e = -0.004\ 442\ 280$
- 1-11** (a) $\sigma = 13.1$ MPa, (b) $\sigma = 70$ MPa,
(c) $y = 15.5$ mm, (d) $\theta = 5.18^\circ$

B-2 Chapter 2

- 2-9** $E = 30$ Mpsi, $S_y = 45.5$ kpsi, $S_{ut} = 85.5$ kpsi,
area reduction = 45.8 percent
- 2-15** $\bar{S}_{ut} = 125.2$ kpsi, $\hat{\sigma}_{S_{ut}} = 1.9$ kpsi
- 2-17** (a) $u_R \doteq 34.5$ in \cdot lbf/in³, (b) $u_T \doteq$
 $66.7(10^3)$ in \cdot lbf/in³
- 2-22** Steel, Titanium, Aluminum, and Composites

B-3 Chapter 3

- 3-4** (a) $V(x) = -1.43 - 40(x - 4)^0 + 30(x - 8)^0 +$
 $71.43(x - 14)^0 - 60(x - 18)^0$ lbf
 $M(x) = -1.43x - 40(x - 4)^1 + 30(x - 8)^1 +$
 $71.43(x - 14)^1 - 60(x - 18)^1$ lbf \cdot in
- 3-6** (a) $M_{\max} = 253$ lbf \cdot in, (b) $(a/l)^* = 0.207$,
 $M^* = 214$ lbf \cdot in
- 3-8** (a) $\sigma_1 = 14$, $\sigma_2 = 4$, $\sigma_3 = 0$, $\phi_p = 26.6^\circ$ ccw;
 $\tau_1 = 5$, $\sigma_{\text{ave}} = 9$, $\phi_s = 18.4^\circ$ ccw
(b) $\sigma_1 = 18.6$, $\sigma_2 = 6.4$, $\sigma_3 = 0$, $\phi_p = 27.5^\circ$ ccw;
 $\tau_1 = 6.10$, $\sigma_{\text{ave}} = 12.5$, $\phi_s = 17.5^\circ$ ccw
(c) $\sigma_1 = 26.2$, $\sigma_2 = 7.78$, $\sigma_3 = 0$, $\phi_p = 69.7^\circ$ ccw;
 $\tau_1 = 9.22$, $\sigma_{\text{ave}} = 17$, $\phi_s = 24.7^\circ$ ccw
(d) $\sigma_1 = 23.4$, $\sigma_2 = 4.57$, $\sigma_3 = 0$, $\phi_p = 61.0^\circ$ ccw;
 $\tau_1 = 9.43$, $\sigma_{\text{ave}} = 14$, $\phi_s = 16.0^\circ$ cw
- 3-13** $\sigma = 10.2$ kpsi, $\delta = 0.0245$ in, $\epsilon_1 = 0.000\ 340$,
 $\nu = 0.292$, $\epsilon_2 = -0.000\ 099\ 3$, $\Delta d =$
 $-0.000\ 049\ 7$ in

3-18 $\sigma_1 = 30$ MPa, $\sigma_2 = 10$ MPa, $\sigma_3 = -20$ MPa,
 $\tau_{\max} = 25$ MPa

3-22 (a) $M_{\max} = 21\ 600$ kip \cdot in, (b) $x_{\max} = 523$ in
from left or right supports

3-23 (a) $\sigma_A = 42$ kpsi, $\sigma_B = 18.5$ kpsi, $\sigma_C = 2.7$ kpsi,
 $\sigma_D = -52.7$ kpsi

3-27 $M_{\max} = 219$ lbf \cdot in, $\sigma = 17.8$ kpsi,
 $\tau_{\max} = 3.4$ kpsi, both models

3-33 The same

3-37 Two $\frac{1}{16}$ -in-thick strips: $T_{\max} = 31.25$ lbf \cdot in,
 $\theta = 0.200$ rad, $k_t = 156$ lbf \cdot in/rad. One $\frac{1}{8}$ -in-thick
strip: $T_{\max} = 62.5$ lbf \cdot in, $\theta = 0.100$ rad,
 $k_t = 625$ lbf \cdot in/rad

3-43 $d_C = 45$ mm

3-48 $\sigma_{\max} = 11.79$ kpsi, $\tau_{\max} = 7.05$ kpsi

3-54 $p_i = 639$ psi

3-58 $(\sigma_r)_{\max} = 3656$ psi

3-66 $\delta_{\max} = 0.038$ mm, $\delta_{\min} = 0.0175$ mm,
 $p_{\max} = 147.5$ MPa, $p_{\min} = 67.9$ MPa

3-70 For δ_{\max} , $p = 33.75$ kpsi, $(\sigma_i)_o = 56.25$ kpsi,
 $(\sigma_i)_i = -33.75$ kpsi, $\delta_o = 0.001\ 10$ in,
 $\delta_i = -0.000\ 398$ in

3-73 $\sigma_i = 26.3$ kpsi, $\sigma_o = -15.8$ kpsi

3-78 $\sigma_i = 71.3$ kpsi, $\sigma_o = -34.2$ kpsi

3-81 $p_{\max} = 399F^{1/3}$ MPa, $\sigma_{\max} = 399F^{1/3}$ MPa,
 $\tau_{\max} = 120F^{1/3}$ MPa

B-4 Chapter 4

4-1 (a) $k = (1/k_1 + 1/k_2 + 1/k_3)$, (b) $k = k_1 +$
 $k_2 + k_3$, (c) $k = [1/k_1 + 1/(k_2 + k_3)]^{-1}$

4-11 $\lambda = \frac{17}{70}[w/(24EI)]^2 l^7$

4-12 $\sigma_{\max} = -20.4$ kpsi, $y_B = -0.908$ in

4-15 $y_{\text{left}} = -1.565$ mm, $y_{\text{right}} = -1.565$ mm,
 $y_{\text{midspan}} = 0.5868$ mm

4-18 $y_{\max} = -0.0130$ in

- 4-20** $z_A = 0.0368$ in, $z_B = -0.00430$ in
4-26 Use $d = 1\frac{3}{8}$ in
4-30 $y_B = -0.0459$ in
4-37 $y_A = -0.101$ in, $y_{x=20\text{ in}} = -0.104$ in
4-46 $y_A = -0.138$ in
4-49 $y_{x=10\text{ in}} = -0.0167$ in
4-52 (a) $\sigma_b = 76.5$ kpsi, $\sigma_c = -15.2$ kpsi,
 (b) $\sigma_b = 78.4$ kpsi, $\sigma_c = -13.3$ kpsi
4-58 $R_O = 3.89$ kip, $R_C = 1.11$ kip, both in
 same direction
4-61 $\sigma_{BE} = 140$ MPa, $\sigma_{DF} = 71.2$ MPa,
 $y_B = -0.670$ mm, $y_C = -2.27$ mm,
 $y_D = -0.339$ mm
4-66 $\delta_A = (\pi + 4)PR^3/(4EI)$, $\delta_B = \pi PR^3/(4EI)$
4-69 $\delta = 0.476$ mm
4-75 (a) $t = 0.5$ in, (b) No
4-83 $y_{\max} = 2k_1a/(k_1 + k_2)$

B-5 Chapter 5

- 5-2** (a) MSS: $n = 4.17$, DE: $n = 4.17$, (b) MSS:
 $n = 4.17$, DE: $n = 4.81$, (c) MSS: $n = 2.08$, DE:
 $n = 2.41$, (c) MSS: $n = 4.17$, DE: $n = 4.81$
5-3 (a) MSS: $n = 2.17$, DE: $n = 2.50$, (b) MSS:
 $n = 1.45$, DE: $n = 1.56$, (c) MSS: $n = 1.52$, DE:
 $n = 1.65$, (c) MSS: $n = 1.27$, DE: $n = 1.50$
5-9 (a) DE: $\sigma' = 12.29$ kpsi, $n = 3.42$
5-10 (a) DCM: $\sigma_1 = 90$ kpsi, $\sigma_2 = 0$, $\sigma_3 = -50$ kpsi,
 $r = -0.56$, $n = 1.77$
5-12 (a) MNS: $n = 3.89$
5-13 (a) $\sigma_A = \sigma_B = 20$ kpsi, $r = 1$, $n = 1.5$
5-20 $(\sigma_t)_{\max} = 13.21$ kpsi, $\sigma_t = 6.48$ kpsi,
 $\sigma_r = -500$ psi, $\sigma' = 11.9$ kpsi, $n = 3.87$
5-23 Using BCM, select $d = 1\frac{3}{8}$ in
5-27 $d = 18$ mm
5-34 (a) $\delta = 0.0005$ in, $p = 3516$ psi,
 $(\sigma_t)_i = -5860$ psi, $(\sigma_r)_i = -3516$ psi,
 $(\sigma_t)_o = -9142$ psi, $(\sigma_r)_o = -3516$ psi
5-38 $n_o = 2.81$, $n_i = 2.41$
5-43 $p = 29.2$ MPa

B-6 Chapter 6

- 6-1** $S_e = 85.7$ kpsi
6-3 $S'_e = 33.1$ kpsi, $\sigma'_F = 112.4$ kpsi, $b = -0.08426$,
 $f = 0.8949$, $a = 106.0$ kpsi, $S_f = 47.9$ kpsi,
 $N = 368$ 250 cycles
6-5 $(S_f)_{\text{ax}} = 162N^{-0.0851}$ kpsi, $10^3 \leq$
 $N \leq 10^6$ cycles
6-6 $S_e = 241$ MPa
6-10 $S'_e = 220$ MPa, $k_a = 0.899$, $k_b = 1$, $k_c = 0.85$,
 $S_e = 168.1$ MPa, $K_t = 2.5$, $K_f = 2.28$,
 $F_a = 19.7$ kN, $F_y = 98.7$ kN
6-12 Yield: $n_y = 1.18$. Fatigue: (a) $n_f = 1.06$,
 (b) $n_f = 1.31$, (c) $n_f = 1.32$
6-17 $n_y = 5.06$, (a) $n_f = 2.17$, (b) $n_f = 2.28$
6-23 At the fillet $n_f = 1.61$
6-24 (a) $T = 3.22$ N · m, (b) $T = 3.96$ N · m,
 (c) $n_y = 1.91$
6-27 (a) $P_{\text{all}} = 16.0$ kN, $n_y = 5.73$, (b) $P_{\text{all}} = 51.0$ kN,
 $n_y = 3.90$
6-29 (a) 24 900 cycles, (b) 27 900 cycles
6-34 Rotation presumed. $S'_e = 55.7$ LN(1, 0.138) kpsi,
 $k_a = 0.768$ LN(1, 0.058), $k_b = 0.879$, $S_e =$
 37.6 LN(1, 0.150) kpsi, $K_f = 1.598$ LN(1, 0.15),
 $\sigma = 22.8$ LN(1, 0.15) kpsi, $z = -2.373$, $R = 0.991$

B-7 Chapter 7

- 7-1** (a) DE-Gerber: $d = 1.02$ in, (b) DE-Elliptic:
 $d = 1.01$ in, (c) DE-Soderberg: $d = 1.09$ in,
 (d) DE-Goodman: $d = 1.07$ in
7-2 Using DE-Elliptic, $d = 24$ mm, $D = 32$ mm,
 $r = 1.6$ mm
7-14 (a) $\omega = 868$ rad/s (b) $d = 2$ in
 (c) $\omega = 1736$ rad/s (doubles)
7-16 (b) $\omega = 466$ rad/s = 4450 rev/min
7-20 $d_{\min} = 45.043$ mm $d_{\max} = 45.059$ mm,
 $D_{\min} = 45.000$ mm, $D_{\max} = 45.025$ mm,
7-23 (a) $d_{\min} = 1.5017$ in, $d_{\max} = 1.5023$ in,
 $D_{\min} = 1.5000$ in, $D_{\max} = 1.5010$ in,
 (b) $p_{\min} = 4480$ psi, $p_{\max} = 14$ 720 psi,
 (c) Shaft: $n = 3.9$, hub: $n = 2.1$
 (d) Assuming $f = 0.3$, $T = 9500$ lbf-in

B-8 Chapter 8

8-1 (a) Thread depth 2.5 mm, thread width 2.5 mm,
 $d_m = 22.5$ mm, $d_r = 20$ mm, $l = p = 5$ mm

8-4 $T_R = 16.23$ N · m, $T_L = 6.62$ N · m, $e = 0.294$

8-8 $F = 161$ lbf

8-11 $L_T = 1.25$ in, $L_G = 1.109$ in, $H = 0.4375$ in,
 $L_G + H = 1.5465$ in, use 1.75 in, $l_d = 0.500$ in,
 $l_t = 0.609$ in

8-13 $L_T = 1.25$ in, $l' = 1.125$ in,
 $L > h + 1.5d = 1.625$ in,
use 1.75 in, $l_d = 0.500$ in, $l_t = 0.625$ in

8-15 (a) $k_b = 1.02(10^6)$ lbf/in, $k_m = 1.27(10^6)$ lbf/in,
 $C = 0.445$, (b) $F_i = 11\ 810$ lbf
(c) $P_0 = 21280$ lbf

8-18 Frusta to Wileman ratio is 1.11/1.08

8-22 $n = 4.73$

8-23 $n = 5.84$

8-27 $k_b = 4.63$ Mlbf/in, $k_m = 7.99$ Mlbf/in using
frustums

8-34 (a) $L = 2.5$ in, (b) $k_b = 6.78$ Mlbf/in,
 $k_m = 14.41$ Mlbf/in, $C = 0.320$ (c) $n_f = 2.76$,
(d) $n_f = 4.19$, (e) $n_{\text{proof}} = 1.17$,

8-37 Load: $n = 3.19$. Separation: $n = 4.71$. Fatigue:
 $n_f = 3.27$

8-43 Bolt shear: $n = 3.26$. Bolt bearing: $n = 5.99$.
Member bearing: $n = 3.71$. Member tension:
 $n = 5.36$

8-48 $F = 1.99$ kN

8-50 Bearing on bolt, $n = 9.58$;
shear of bolt, $n = 5.79$;
bearing on members, $n = 5.63$;
bending of members, $n = 2.95$

B-9 Chapter 9

9-1 $F = 17.7$ kip

9-3 $F = 11.3$ kip

9-5 (a) $\tau' = 1.13F$ kpsi, $\tau_x'' = \tau_y'' = 5.93F$ kpsi,
 $\tau_{\text{max}} = 9.22F$ kpsi, $F = 2.17$ kip; (b) $\tau_{\text{all}} = 11$ kpsi,
 $F_{\text{all}} = 1.19$ kip

9-8 $F = 49.2$ kN

9-9 A two-way tie for first, vertical parallel beads, and
square beads

9-10 First: horizontal parallel beads. Second: square
beads

9-11 Decisions: Pattern; all-around square
Electrode: E60XX
Type: two parallel fillets, two transverse fillets
Length of beads: 12 in
Leg: $\frac{1}{4}$ in

9-20 $\tau_{\text{max}} = 18$ kpsi

9-22 $n = 3.57$

B-10 Chapter 10

10-3 (a) $L_0 = 5.17$ in, (b) $F_{S_{sy}} = 45.2$ lbf,
(c) $k = 11.55$ lbf/in, (d) $(L_0)_{\text{cr}} = 5.89$ in, guide
spring

10-5 (a) $L_0 = 47.7$ mm, (b) $p = 5.61$ mm, (c) $F_s =$
81.1 N, (d) $k = 2643$ N/m, (e) $(L_0)_{\text{cr}} = 105.2$ mm,
needs guidance

10-9 Is solid safe, $L_0 \leq 0.577$ in

10-15 Is solid safe, $L_0 \leq 66.6$ mm

10-19 (a) $p = 10$ mm, $L_s = 44.2$ mm, $N_a = 12$ turns,
(b) $k = 1080$ N/m, (c) $F_s = 81.9$ N, (d) $\tau_s =$
271 MPa

10-29 (a) $L_0 = 16.12$ in, (b) $\tau_i = 14.95$ kpsi,
(c) $k = 4.85$ lbf/in, (d) $F = 85.8$ lbf,
(e) $y = 14.4$ in

10-33 (a) $k' = 24.7$ lbf · in/turn each, (b) 297 kpsi

10-34 $k = 2EI/[R^2(19\pi R + 18l)]$

B-11 Chapter 11

11-1 $x_D = 540$, $F_D = 2.278$ kN, $C_{10} = 18.59$ kN,
02–30 mm deep-groove ball bearing, $R = 0.919$

11-8 $x_D = 180$, $C_{10} = 57.0$ kN

11-11 $C_{10} = 8.90$ kN

11-13 $R_0 = 112$ lbf, $R_C = 298$ lbf, deep-groove
02–12 mm at O , deep-groove 02–30 mm at C

11-18 $l_2 = 0.267(10^6)$ rev

B-12 Chapter 12

12-1 $c_{\text{min}} = 0.000\ 75$ in, $r = 0.500$ in, $r/c = 667$,
 $N_j = 18.3$ r/s, $S = 0.261$, $h_0/c = 0.595$, $rf/c = 5.8$,
 $Q/(rcNl) = 3.98$, $Q_s/Q = 0.5$, $h_0 = 0.000\ 446$ in,
 $H = 0.0134$ Btu/s, $Q = 0.0274$ in³/s,
 $Q_s = 0.0137$ in³/s

1042 Mechanical Engineering Design

- 12–3** SAE 10: $h_0 = 0.000\ 275$ in, $p_{\max} = 847$ psi,
 $c_{\min} = 0.0025$ in
- 12–7** $h_0 = 0.0165$ mm, $f = 0.007\ 65$,
 $Q = 1263$ mm³/s
- 12–9** $h_0 = 0.010$ mm, $H = 34.3$ W, $Q =$
 1072 mm³/s, $Q_s = 793$ mm³/s
- 12–11** $T_{\text{av}} = 65^\circ\text{C}$, $h_0 = 0.0272$ mm, $H = 45.2$ W,
 $Q_s = 1712$ mm³/s
- 12–20** 15.2 mPa · s

B–13 Chapter 13

- 13–1** 35 teeth, 3.25 in
- 13–2** 400 rev/min, $p = 3\pi$ mm, $C = 112.5$ mm
- 13–4** $a = 0.3333$ in, $b = 0.4167$ in, $c = 0.0834$ in,
 $p = 1.047$ in, $t = 0.523$ in, $d_1 = 7$ in, $d_{1b} =$
 6.578 in, $d_2 = 9.333$ in, $d_{2b} = 8.77$ in,
 $p_b = 0.984$ in, $m_c = 1.55$
- 13–5** $d_p = 2.333$ in, $d_G = 5.333$ in, $\gamma = 23.63^\circ$,
 $\Gamma = 66.37^\circ$, $A_0 = 2.910$ in, $F = 0.873$ in
- 13–8** (a) 13, (b) 15, 16, (c) 18
- 13–10** 10:20 and higher
- 13–13** (a) $p_n = 3\pi$ mm, $p_t = 10.40$ mm,
 $p_x = 22.30$ mm, (b) $m_t = 3.310$ mm,
 $\phi_t = 21.88^\circ$, (c) $d_p = 59.58$ mm,
 $d_G = 105.92$ mm
- 13–15** $e = 4/51$, $n_d = 47.06$ rev/min cw
- 13–22** $n_A = 68.57$ rev/min cw
- 13–29** $\mathbf{F}_A = 71.5\ \mathbf{i} + 53.4\ \mathbf{j} + 350.5\ \mathbf{k}$ lbf,
 $\mathbf{F}_B = -178.4\ \mathbf{i} - 678.8\ \mathbf{k}$ lbf
- 13–36** $\mathbf{F}_C = 1565\ \mathbf{i} + 672\ \mathbf{j}$ lbf;
 $\mathbf{F}_D = 1610\ \mathbf{i} - 425\ \mathbf{j} + 154\ \mathbf{k}$ lbf

B–14 Chapter 14

- 14–1** $\sigma = 7.63$ kpsi
- 14–4** $\sigma = 82.6$ MPa
- 14–7** $F = 2.5$ in
- 14–10** $m = 2$ mm, $F = 25$ mm
- 14–14** $\sigma_c = -617$ MPa
- 14–17** $W^t = 16\ 890$ N, $H = 97.2$ kW
 (pinion bending); $W^t = 3433$ N, $H = 19.8$ kW
 (pinion and gear wear)

- 14–18** $W^t = 1283$ lbf, $H = 32.3$ hp (pinion bending);
 $W^t = 1510$ lbf, $H = 38.0$ hp (gear bending),
 $W^t = 265$ lbf; $H = 6.67$ hp (pinion and gear wear)
- 14–22** $W^t = 775$ lbf, $H = 19.5$ hp (pinion bending);
 $W^t = 300$ lbf, $H = 7.55$ hp (pinion wear) AGMA
 method accounts for more conditions
- 14–24** Rating power = $\min(157.5, 192.9, 53.0, 59.0) =$
 53 hp
- 14–28** Rating power = $\min(270, 335, 240, 267) =$
 240 hp
- 14–34** $H = 69.7$ hp

B–15 Chapter 15

- 15–1** $W_p^t = 690$ lbf, $H_1 = 16.4$ hp, $W_G^t = 620$ lbf,
 $H_2 = 14.8$ hp
- 15–2** $W_p^t = 464$ lbf, $H_3 = 11.0$ hp, $W_G^t = 531$ lbf,
 $H_4 = 12.6$ hp
- 15–8** Pinion core 300 Bhn, case, 373 Bhn; gear core
 339 Bhn, case, 345 Bhn
- 15–9** All four $W^t = 690$ lbf
- 15–11** Pinion core 180 Bhn, case, 266 Bhn; gear core,
 180 Bhn, case, 266 Bhn

B–16 Chapter 16

- 16–1** (a) Right shoe: $p_a = 111.4$ psi cw rotation,
 (b) Right shoe: $T = 2530$ lbf · in; left shoe:
 1310 lbf · in; total $T = 3840$ lbf · in, (c) RH shoe:
 $R^x = -229$ lbf, $R^y = 940$ lbf, $R = 967$ lbf; LH
 shoe: $R^x = 130$ lbf, $R^y = 171$ lbf, $R = 215$ lbf
- 16–3** LH shoe: $T = 161.4$ N · m, $p_a = 610$ kPa; RH
 shoe: $T = 59.0$ N · m, $p_a = 222.8$ kPa, $T_{\text{total}} =$
 220.4 N · m
- 16–5** $p_a = 203$ kN, $T = 38.76$ N · m
- 16–8** $a' = 1.209r$, $a = 1.170r$
- 16–10** $P = 1560$ lbf, $T = 29\ 980$ lbf · in
- 16–14** (a) $T = 8200$ lbf · in, $P = 504$ lbf, $H = 26$ hp;
 (b) $R = 901$ lbf; (c) $p|_{\theta=0} = 70$ psi,
 $p|_{\theta=270^\circ} = 27.3$ psi
- 16–17** (a) $F = 1885$ lbf, $T = 7125$ lbf · in;
 (c) torque capacity exhibits a stationary point
 maximum
- 16–18** (a) $d^* = D/\sqrt{3}$; (b) $d^* = 3.75$ in, $T^* = 7173$
 lbf · in; (c) $(d/D)^* = 1/\sqrt{3} = 0.577$

- 16-19** (a) Uniform wear: $p_a = 82.2$ kPa, $F = 949$ N;
(b) Uniform pressure: $p_a = 79.1$ kPa, $F = 948$ N

16-23 $C_s = 0.08$, $t = 5.30$ in

16-26 (b) $I_e = I_M + I_P + n^2 I_P + I_L/n^2$;

(c) $I_e = 10 + 1 + 10^2(1) + 100/10^2 = 112$

- 16-27** (c) $n^* = 2.430$, $m^* = 4.115$, which are independent of I_L

B-17 Chapter 17

- 17-1** (a) $F_c = 0.913$ lbf, $F_i = 101.1$ lbf, $F_{1a} = 147$ lbf, $F_2 = 57$ lbf; (b) $H_a = 2.5$ hp, $n_{fs} = 1.0$;
(c) 0.151 in

- 17-3** A-3 polyamide belt, $b = 6$ in, $F_c = 77.4$ lbf, $T = 10\,946$ lbf · in, $F_1 = 573.7$ lbf, $F_2 = 117.6$ lbf, $F_i = 268.3$ lbf, dip = 0.562 in

- 17-5** (a) $T = 742.8$ lbf · in, $F_i = 148.1$ lbf;
(b) $b = 4.13$ in; (c) $F_{1a} = 289.1$ lbf, $F_c = 17.7$ lbf, $F_i = 147.6$ lbf, $F_2 = 41.5$ lbf, $H = 20.6$ hp, $n_{fs} = 1.1$

- 17-7** $R^x = (F_1 + F_2)\{1 - 0.5[(D - d)/(2C)]^2\}$,
 $R^y = (F_1 - F_2)(D - d)/(2C)$. From Ex. 17-2,
 $R^x = 1214.4$ lbf, $R^y = 34.6$ lbf

- 17-14** With $d = 2$ in, $D = 4$ in, life of 10^6 passes,
 $b = 4.5$ in, $n_{fs} = 1.05$

- 17-17** Select one B90 belt

- 17-20** Select nine C270 belts, life $> 10^9$ passes, life $> 150\,000$ h

- 17-24** (b) $n_1 = 1227$ rev/min. Table 17-20 confirms this point occurs in the range 1200 ± 200 rev/min, (c) Eq. (17-40) applicable at speeds exceeding 1227 rev/min for No. 60 chain

- 17-25** (a) $H_a = 7.91$ hp; (b) $C = 18$ in; (c) $T = 1164$ lbf · in, $F = 744$ lbf

- 17-27** Four-strand No. 60 chain, $N_1 = 17$ teeth, $N_2 = 84$ teeth, rounded $L/p = 134$, $n_{fs} = 1.17$, life 15 000 h (pre-extreme)

B-20 Chapter 20

- 20-1** $\bar{x} = 122.9$ kilocycles, $s_x = 30.3$ kilocycles

- 20-2** $\bar{x} = 198.55$ kpsi, $s_x = 9.55$ kpsi

- 20-3** $\bar{x} = 78.4$ kpsi, $s_x = 6.57$ kpsi

- 20-11** (a) $\bar{F}_i = 5.979$ lbf, $s_{F_i} = 0.396$ lbf;
(b) $\bar{k} = 9.766$ lbf/in, $s_k = 0.390$ lbf/in

- 20-19** $L_{10} = 84.1$ kcycles

- 20-23** $R = 0.987$

- 20-25** $x_{0.01} = 88.3$ kpsi

- 20-32** 78.1 kcycles, 82.7 kcycles

Index

A

- Abrasion, 723
ABS group, 54
Absolute system of units, 21
Absolute tolerance system, 20
Absolute viscosity, 600
Acetal group, 54
Acme threads, 398–400
Acrylic, 54
Actual stress, 30
Adams, R. D., 483, 489
Addendum, 656
Addendum circle, 656
Adhesive bonding, 480–489
Adhesive joint design, 486–488
Admiralty metal, 53
AGMA equations/standards
 bevel gears, 769–783
 spur and helical gears, 715–716,
 725–745
 worm gears, 789–792
AISC code, 471, 472
Algor, 934
Alkyd, 55
Allowance, 19
Alloy cast irons, 50
Alloy steels, 47–48
Allylic, 55
Aluminum, 51–52
 numbering system, 41
 physical constants, 987
 tensile tests, 1023
Aluminum alloy, 51–52, 637, 1023,
 1027
Aluminum alloy designations, 41
Aluminum brass, 53
Aluminum bronze, 53–54
Aluminum manufacturers
 Association (AGMA), 714. *See also* AGMA equation/standards
American Standard Pipe, 1019
Amino group, 55
Anaerobic adhesives, 482
Analysis and optimization, 7
Analysis tools, 912–982
 case study. *See* Power transmission
 case study
 FEA, 933–955. *See also* Finite-
 element analysis (FEA)
 statistics, 957–982. *See also*
 Statistical considerations
Anderson, G. P., 489
Angle of action, 662
Angle of approach, 662
Angle of articulation, 888
Angle of recess, 662
Angle of twist, 95, 97
Angular-contact bearing, 551, 552
Annealing, 45
Annular-pad segment of a caliper brake,
 830
Anodizing, 51
Answers to selected problems,
 1039–1043
ANSYS, 934
Antiflutter adhesive bonding, 481
Antifriction-bearing lubricant, 587
Antifriction bearings, 550. *See also*
 Rolling-constant bearings
Arc of action, 664
Arc of approach, 664
Arc of recess, 664
Arc-weld symbol, 459
Argyris, J. H., 935n
Arithmetic mean, 960
Ashby charts, 59–62
Ashby, Mike F., 57–62
ASM *Metals Handbook*, 261
ASME-elliptic failure criterion,
 297–300
ASTM numbering system, 41
ASTM specifications (steel bolts), 419
Atkins, Anthony G., 231n
Automated mesh generation, 943
Automobile body, 481
Automotive axle, 348
Automotive disk brake, 829
Average life, 554
AWS code, 472
AWS standard welding symbol, 458
Axial pitch, 672, 675
Axle, 348
Bainite, 45
Bairstow, L., 268n
Ball bearings, 550. *See* Rolling-constant
 bearings
Ball bushings, 553
Band-type clutches/brakes, 824–825
Barsom, J. M., 272
Barth, Carl G., 719
Barth equation, 719
Base circle, 658, 660
Base pitch, 662
Base units, 21
Bathe, K. J., 953n
Bazant, Z. P., 182n
BCM theory, 227
Beach marks, 258
Beam. *See also* Shear, moment and
 deflection of beams
 asymmetrical sections, 89–90
 bending moments, 71–72
 bending stresses, 85–90
 curved, in bending, 112–116
 deflection, 146–156
 shear force, 71–72
 shear stresses, 90–95
 two-plane bending, 88
Beam deflection methods, 146–156
Bearing alloys, 637
Bearing characteristic number, 602
Bearing life, 553
Bearing load-life log-log curve, 554
Bearing mountings, 571, 573, 587–590
Bearing pressure, 899–900
Bearing Selection Handbook—Revised,
 571, 572
Bearing stress, 437
Beer, F. P., 102n, 147n, 173n
Belegundu, A. D., 941n
Belleville springs, 539, 540
Belt, 860–887
 flat. *See* Flat belts
 nonreversing/reversing drives, 861
 round, 860. *See also* Flat belts
 timing, 860, 862–863, 886–887
 types, 860
 V. *See* V belts
Belting equation, 865, 867
Belt-tension schemes, 872
Bending and deflection, 144–146

- Bending moments (beams), 71–72
 Bending properties (fillet welds), 470
 Bending strength geometry factor, 732–733, 773, 774
 Bending strength stress-cycle factor, 743
 Bending stress
 beams, 85–95
 bevel gears, 771, 779–782, 787–788
 Lewis bending equation, 714–723
 spur and helical gears, 725–731, 746, 750, 752–753
 torsion springs, 534
 welded joints, 469–471
 Bennett, S. J., 489
 Bergsträsser factor, 501, 519
 Beryllium bronze, 54
 Beryllium copper, 987
 Beryllium-copper wire, 508
 Bethlehem Steel, 47
 Bevel gears, 655, 670–671, 766–788.
 See also Gears
 AGMA equation factors, 769–783
 bending stress, 771, 779–782, 787–788
 carburized case-hard materials, 782–783
 contact stress, 768–771, 778, 779, 788
 design of straight-bevel gear mesh, 786–788
 dynamic factor, 771–772
 elastic coefficient, 778
 force analysis, 689–692
 geometry factors, 773, 774
 hardness-ratio factor, 776, 777
 intersecting- vs. offset- shaft, 768
 load-distribution factor, 773
 overload factor, 771
 reliability factors, 777, 778
 safety factors, 771
 size factor, 773
 straight-bevel gear analysis, 783–785
 stress cycle factors, 775, 776
 stresses/strengths, 768–771, 778–782, 787–788
 through-hardening, 782
 tooth system, 677
 types, 670–671, 766–768
 wear equations (summary), 781
 Bevel lap joint, 483
 Beyer, William H., 1038
 Bilateral tolerance, 19
 Binding head screw, 410
 Bis-maleimide adhesive, 482
 Blake, J. C., 423n
 Boedo, S., 934n
 Bolt preload, 411
 Bolt strength, 417–421
 Bolt torque/bolt tension, 422–425
 Bolted and riveted joints loaded in shear, 435–443
 Bonding, 480–489. *See also* Welding
 and bonding—permanent joints
 Book, overview, 4
 Booser, E. R., 625n
 Boresi, Arthur P., 117n, 215n
 BOST-FLEX, 845
 Bottom land, 656
 Boundary conditions, 945–946
 Boundary elements, 946
 Boundary lubrication, 599, 641
 Boundary representation (B-rep), 943
 Boundary-lubricated bearings, 640–648
 bushing wear, 643–646
 linear sliding wear, 641–643
 temperature rise, 646–648
 Bowman Distribution, 424, 427
 Boyd, John, 611–612
 Brake linings, 843
 Brakes, 805–858. *See also* Clutches,
 brakes, etc.
 Brandes, E. A., 283n
 Brass, 52–53, 987
 Breakeven points, 13–14
 B-rep, 943
 Brinell hardness, 36
 Brinson, H. F., 489
 Brittle-Coulomb-Mohr (BCM) theory, 227
 Brittle materials, 29, 106, 226–230. *See also*
 Failure of brittle materials
 Broek, D., 231n
 Broghamer, E. I., 723n
 Bronze, 53–54
 Brown, Thomas H., Jr., 46n, 47n, 165n,
 275n, 349n, 370n, 379n, 507n,
 508, 738n
 Bubble chart, 59
 Buckingham, Earle, 319–321, 792, 800,
 801
 Buckingham load-stress factor, 320
 Buckingham wear load, 800–801
 Buckingham's adaptation of Lewis
 equation, 792
 Budynas, Richard G., 83n, 97n, 107n,
 113n, 147n, 157, 163n, 228n,
 946n, 949n
 Burnishing, 670
 Bushed-pin bearings, 641
 Bushing, 598, 638
 Bushing wear, 643–646
 Butt and fillet welds, 460–463. *See also*
 Fillet welds
 Butt strap lap joint, 483
 Button-pad caliper brake, 832, 833
- C**
 CAD software, 8–9, 934. *See also*
 Finite-element analysis (FEA)
 Cadmium, 637
 CAE, 9
 Calculations and significant figures,
 22–27
 Caliper brakes, 829–833
 Cantilever
 end load, 993
 intermediate load, 993
 moment load, 994
 uniform load, 994
 Cap-screw heads, 409
 Carbon steel, 987, 1030
 Carburized case-hard materials,
 782–783
 Carlson, Harold C. R., 506
 Cartesian stress components, 75–76
 Cartridge brass, 53
 Case hardening, 47
 Case study. *See* Power transmission
 case study
 Case-hardened part, 285–286
 Cast iron, 41, 49–50. *See also* Gray
 cast iron
 Cast steels, 51
 Castigliano's theorem, 158–163, 502
 Casting alloys, 51
 Castings materials, 49–57
 Catalog load rating, 554
 Catenary theory, 872
 CD steel, 1020
 CDF, 959
 Cedolin, L., 182n
 Cellosics adhesive, 482
 Centipoise (cP), 600
 Centistokes (cSt), 600
 Central loading
 columns, 173–176
 fixed supports, 999
 one fixed and one simple support,
 998
 simple supports, 995
 Centrifugal castings, 42, 667
 Centrifugal clutch, 812
 Centroidal axis, 85, 113
 Ceramics, 57
 Cermet pads, 843
 CES Edupack, 57
 cgs units, 600
 Chain drives, 887–895. *See also*
 Roller chain
 Chain velocity, 889
Chains for Power Transmission and
Materials Handling, 891
 Chandrupatla, T. R., 941n
 Charpy notched-bar test, 38, 39
 Chevron lines, 259

- Chilled-cast gears, 790
Chordal speed variation, 890
Choudury, M., 415n, 416
Chrome-silicon wire, 506–508
Chrome-vanadium wire, 506–508
Chromium, 47
Chromium-nickel stainless steels, 49
Circle, 1016
Circular pitch, 655, 656, 672
Circular-pad caliper brake, 832, 833
Clamshell marks, 258
Class frequency, 32
Claussen, G. E., 462n
Clearance
 defined, 19
 gears, 656
 journal bearings, 628–630
 worm gears, 792
Clearance circle, 656
Clearance fits, 385
Close running fit, 385
Closed thin-walled tubes, 102
Close-wound, 526
Clough, R. W., 936n
Clutches, brakes, etc., 805–858
 band-type clutches/brakes, 824–825
 brake linings, 843
 cone clutches/brakes, 833–835
 couplings, 806, 844–845
 disk brake, 829–833
 drum brake, 812–824, 829
 energy considerations, 836–837
 external contracting clutches/brakes,
 820–824
 factors to consider, 806
 flywheel, 806, 846–851
 friction materials, 841–844
 frictional-contact axial clutch,
 825–828
 internal expanding clutches/brakes,
 812–820
 overload release clutch, 844, 845
 overrunning clutch/coupling, 845
 rim clutches/brakes, 812–820
 self-acting/self-locking phenomenon,
 809
 self-deenergization, 807
 self-energization, 807, 829
 shaft couplings, 845
 slippage, 806
 square-jaw clutch, 844, 845
 static analysis, 807–811
 temperature rise, 837–841
Coarse-pitch threads, 398, 399
Code, 12
Coefficient of friction
 boundary-lubricated bearings, 642
 clutches/brakes, 809
 journal bearings, 618, 619
 screw threads, 407, 408
 worm gears, 795
Coefficient of speed fluctuation, 847
Coefficient of variation, 962
Coffin, L. F., Jr., 270n
Cold drawing, 44
Cold forming, 667
Cold rolling, 44, 667
Cold working, 33–35
Cold-drawn (CD) steel, 1020
Cold-finished bars, 44
Cold-rolled bars, 44
Cold-work factor, 34
Cold-working processes, 44
Collins, J. A., 272n, 296, 319n
Columns, 173. *See also* Compression
 members
 Combination of loading modes,
 309–313, 339
 Commercial bronze, 52
 Commercial seal, 590
 Companion distribution, 967
 Completely reversed sinusoidal
 stress, 293
 Completely reversing simple loads, 309,
 337–338
 Composite materials, 55–56
 Compound reverted gear train, 681, 914
 Compression members, 173–181
 columns with eccentric loading,
 176–180
 intermediate-length columns with
 central loading, 176
 long columns with central loading,
 173–176
 struts, 180–181
 Compression springs, 502–503. *See also*
 Mechanical springs
 end-condition constant, 504
 fatigue loading, 518–524
 spring ends, 502–503
 static loading, 510–516
 Compressive strengths, 30–31
 Compressive stress, 75, 182
 Computational errors, 936
 Computational tools, 8–9
 Computer-aided design (CAD), 8–9,
 934. *See also* Finite-element
 analysis (FEA)
 Computer-aided engineering (CAE), 9
 Comyn, J., 483, 489
 Concept design, 6–7
 Cone angle, 833
 Cone clutches/brakes, 833–835
 Conical spring, 540
 Conjugate action, 657
 Constant-force spring, 540, 541
 Constructive solid geometry (CSG), 943
 Contact adhesives, 482
 Contact fatigue strength, 320
 Contact geometry factor, 773, 774
 Contact ratio, 664–665
 Contact strength, 320
 Contact stress, 117–120. *See also* Stress
 Contact stress cycle factor for pitting
 resistance, 775
 Continuous random variable, 959
 Cook, R. D., 949n, 953n
 Copper, 987
 Copper-base alloys, 52–54
 Copper-lead, 637
 Correlation coefficient, 975
 Corrosion, 286
 corrosion-resistant steels, 48–49
 Cost, 12–15
 Cost estimates, 15
 Coulomb-Mohr theory, 219–222
 Couplings, 806, 844–845. *See also*
 Clutches, brakes, etc.
 Courant, R., 935n
 cP, 600
 Crack formation, 259
 Crack growth, 232, 271–273
 Crack propagation modes, 233
 Crafts, W., 47n
 Creep, 39
 Creep-time curve, 40
 Critical buckling load, 949–951
 Critical frequency of helical springs,
 516–518
 Critical speeds, 371–376
 Critical stress intensity factor, 234
 Critical unit load, 174
 Crossed belt, 861, 863
 Crowned pulleys, 860
 Crowning factor for pitting, 773
 CSG, 943
 cSt, 600
 Cumulative density function (CDF), 959
 Cumulative fatigue damage, 313–319
 Cumulative frequency distribution, 960
 Cumulative probability distribution, 959
 Curvature effect, 501–502
 Curved beams in bending, 112–116
 Curved members and deflection, 163–167
 Curved-beam theory, 534
 Cyanoacrylate adhesive, 482
 Cyclic frequency, 286
 Cylinder, 1018
 Cylindrical contact, 118–120
 Cylindrical fit, 384
- D**
Dahleh, Marie Dillon, 184n, 371n, 372n
Damage theories, 313–319
Damage-tolerant design, 231
Dandage, S., 615

- Daniel, I. M., 55n
 Datsko, Joseph, 34n, 1023
 DB mounting, 589
 DCM theory, 219–222
 DE theory, 213–219, 246
 De Wolf, J. T., 102n
 Decimal inches (preferred sizes), 1015
 Dedendum, 656
 Dedendum circle, 656
 Deep-groove bearing, 551
 Definition of problem, 6
 Deflection
 FEA, 946
 helical springs, 502
 power transmission systems, 926–927
 shaft, 367–370
 SI units, 987
 springs, 502, 534–536
 stiffness. *See* Deflection and stiffness
 torsion springs, 534–536
 Deflection and stiffness, 141–203. *See*
 also Shear, moment and deflection
 of beams
 beam deflection methods, 146–156
 bending and deflection, 144–146
 Castigliano's theorem, 158–163
 compression members, 173–181. *See*
 also Compression members
 curved members, 163–167
 elastic stability, 182–183
 impact, 183–184
 shock, 183–184
 spring rates, 142–143
 statically indeterminate problems,
 168–173
 strain energy, 156–158
 suddenly applied loading, 184–186
 superimposition, 147–150
 tension, compression, torsion, 143
 variable-cross-section punch-press
 frame, 166–167
 Degrees of freedom (dof's), 935, 939
 Derived unit, 21
 Design, 4–5
 Design considerations, 8
 Design factor, 17–18
 Design factor in fatigue, 334–336
 Design process, 5–7
 Design tools and resources, 8–10
 Deterministic method, 16–17
 Deterministic quantity, 962
 Deviation, 383
 DeVries, K. L., 489
 DeWolf, J. T., 147n, 173n
 DF mounting, 589
 Diameter series, 560
 Diametral clearance, 19
 Diametral pitch, 656
 Diamond Chain Company, 894
 Die castings, 42, 667
 Dieter, George E., 8n
 Dillard, David A., 480n
 Dimensioning, 19–21
 Dimension-series code, 560
 Direct load, 440
 Direct mounting, 571, 573
 Directional characteristics, 285
 Discontinuity, 259
 Discrete frequency histogram, 961
 Discrete random variable, 959
 Discretization errors, 936
 Disk brake, 829–833
 Disk friction member, 826
 Distortion-energy (DE) theory,
 213–219, 246
 dof's, 935, 939
 Dolan, Thomas J., 296, 723n
 Doorstop, 807, 808
 Double butt trap lap joint, 483
 Double helical gears, 671
 Double V-groove weld, 460
 Double-enveloping worm-gear set, 655
 Double-lap joint, 483, 484
 Double-row bearings, 551, 552
 Double-strand roller chain, 887
 Double-threaded, 396
 Douglas fir, 987
 Dowel pin, 379
 Dowling, N. E., 222, 228, 270n, 272,
 294n
 Drawing, 46
 Drive pin, 379
 Drum brake, 812–824, 829
 DT mounting, 589
 Ductile cast iron, 50
 Ductile Coulomb-Mohr (DCM) theory,
 219–222
 Ductile materials, 29, 30, 211–225. *See*
 also Failure of ductile materials
 Ductility, 34
 Dudley, Darle W., 730
 Dunkerley's equation, 374
 Duplexing, 589
 Dyn, 600
 Dynamic equivalent radial loads,
 578–579
 Dynamic factor
 bevel gears, 771–772
 spur and helical gears, 736–738
 Dyne (dyn), 600
- E**
 Eccentric loading
 columns, 176–180
 shear joints, 439–443
 Eccentrically loaded column, 176–180
 Eccentrically loaded strut, 180
 Eccentricity, 605
 Eccentricity ratio, 177, 605
 Economics, 12–15
 Edge shearing, 436, 437, 439
 Effective arc, 863
 Effective dimension, 281
 Effective slenderness ratio, 504
 EHD, 587, 599
 Elastic coefficient, 724
 bevel gears, 778
 spur and helical gears, 736, 737
 Elastic creep, 863
 Elastic limit, 29
 Elastic machine elements. *See* Flexible
 mechanical elements
 Elastic stability, 182–183
 Elastic strain, 83–84
 Elasticity, 142
 Elastic-strain line, 270
 Elastohydrodynamic lubrication (EHD),
 587, 599
 Elastomers, 58
 Electrolytic plating, 286
 Element geometries, 937–939
 Element library, 937
 Element loads, 945
 Elimination approach, 941
 End load, cantilever, 993
 End-condition constant, 174, 504
 End-of-chapter problems, answers,
 1039–1043
 Endurance limit, 264, 274–275
 case-hardened part, 285–286
 corrosion, 286
 cyclic frequency, 286
 directional characteristics, 285
 electrolytic plating, 286
 fretage corrosion, 286
 loading factor, 282
 metal spraying, 286
 miscellaneous-effects factor, 285–286
 modifying (Marin) factors, 278–286,
 323–326
 reliability factor, 284, 285
 residual stress, 285
 size factor, 280–281
 stochastic analysis, 322–326
 surface factor, 279
 temperature factor, 282–284
 Endurance limit modifying factors,
 278–286, 323–326
 Energy
 brakes/clutches, 836–837
 strain, 156–158
 Engineering, 264
 Engineering stresses/strengths, 30, 31
 Engineering stress-strain diagrams, 30
 Engineer's creed, 11
 Engraver's brass, 53

- Ensign, C. R., 318n
EP lubricants, 640
Epicyclic gear trains, 683
Epoxy, 55
Eppinger, Steven D., 15n
Equation
 AGMA. *See* AGMA
 equations/standards
 Barth, 719
 belting, 865, 867
 Dunkerley's, 374
 Euler's, 849
 Lewis bending, 714–723
 Marin, 279
 modified Neuber, 327
 multipoint constraint, 946
 Neuber, 288
 Newton's energy loss, 838–839
 normal coupling, 241
 Petroff's, 602
 piecewise differential, 184
 plane-stress transformation, 76
 Rayleigh's, 371
 Reynolds, 609
Equilibrium, 68
Equivalent bending load, 897, 902
Equivalent radial load, 559, 560
Euler column formula, 174
Euler's equation, 849
Evaluation, 7
Expanding-ring clutch, 812
Extension springs, 524–532
External contracting clutches/brakes,
 820–824
External self-aligning bearing, 551
Extreme-pressure (EP) lubricants, 640
Extrusion, 43, 667
- F**
- Face width, 678
Face-contact ratio, 731
Factor of safety, 17
Factors of safety. *See* Safety factors
Failure of brittle materials, 226–230
 BCM theory, 227
 MM theory, 227–228
 MNS theory, 226–227
 selection flowchart, 230
 summary, 229–230
Failure of ductile materials, 211–225
 Coulomb-Mohr theory, 219–222
 DE theory, 213–219
 MSS theory, 211–212
 selection flowchart, 230
 summary, 222–225
Failure prevention, 204–345
 brittle materials, 226–230. *See also*
 Failure of brittle materials
 ductile materials, 211–225. *See also*
 Failure of ductile materials
 failure theory selection flowchart,
 230
 fatigue failure, 257–345. *See also*
 Fatigue failure—variable loading
 static loading, 205–255. *See also*
 Failure—static loading
 Failure theory selection flowchart, 230
Failure—static loading, 205–255
 brittle materials, 226–230. *See also*
 Failure of brittle materials
 compression springs, 510–516
 ductile materials, 211–225. *See also*
 Failure of ductile materials
 failure theory selection flowchart,
 230
 fracture mechanics, 231–240
 photographs of failed parts, 206–208
 static strength, 208–209
 stochastic analysis, 240–246
 stress concentration, 106, 209–210
 welding, 474–477
Fastener, 408–410. *See also* Screws and
 fasteners—nonpermanent joints
Fastener stiffness, 410–413
Fatigue crack growth, 271–273
Fatigue ductility coefficient, 269
Fatigue ductility exponent, 269
Fatigue factor of safety, 299, 300
Fatigue failure, 258–263
Fatigue failure—variable loading,
 257–345
 ASME-elliptic line, 297–300
 ball bearings, 564–568
 combination of loading modes,
 309–313, 339
 completely reversing simple loads,
 309, 337–338
 cumulative fatigue damage, 313–319
 design factor, 334–336
 endurance limit, 274–275. *See also*
 Endurance limit
 fatigue failure, 258–263
 fatigue strength, 275–278
 fluctuating simple loads, 309,
 338–339
 fluctuating stress, 292–309, 330–334
 Gerber line, 297–299
 Langer line, 297–300
 linear-elastic fracture mechanics
 method, 270–274
 Manson method, 318
 Marin factors, 278–286
 Miner rule, 314–317
 modified Goodman diagram, 295
 modified Goodman line, 297–299
 notch sensitivity, 287–292, 326–330
 overview, 264–265
 Smith-Dolan locus, 306
 Soderberg line, 297–298
 strain-life method, 268–270
 stress concentration, 287–292,
 326–330
 stress-life method, 266–268
 surface fatigue strength, 319–322
 torsional fatigue strength (fluctuating
 stress), 309
Fatigue loading
 compression springs, 518–524
 tension joints, 429–435
 welding, 478–480
Fatigue ration, 322, 324
Fatigue strength, 267, 275–278
Fatigue strength coefficient, 269
Fatigue strength exponent, 270
Fatigue stress-concentration factor,
 287, 732
Fatigue-life methods, 265–274
 linear-elastic fracture mechanics
 method, 270–274
 strain-life method, 268–270
 stress-life method, 266–268
Fazekas, G. A., 833
FEA, 933–955. *See also* Finite-element
 analysis (FEA)
Felbeck, David K., 231n
Felt seal, 590
Ferritic chromium steels, 49
Field, J., 47n
Filler, 55
Fillet, 661
Fillet welds, 460–463
 bending properties, 470
 parallel, 463
 stress distribution, 463
 symbols, 459
 torsional properties, 466
 transverse, 461
Filling notch, 551, 552
Fillister head screw, 409, 410
Film pressure, 621–622
Fine-pitch threads, 398, 399
Finishing the tooth profiles, 670
Finite-element analysis (FEA), 933–935
 boundary conditions, 945–946
 critical buckling load, 949–951
 deflection, 946
 element geometries, 937–939
 elimination approach, 941
 errors, 935–936
 historical overview, 935–936
 load application, 944–945
 mesh generation, 941
 modal analysis, 951–952
 modeling techniques, 946–949
 nodes, 937
 partitioning, 941

- reference books, 953
 solution process, 939–942
 sources of information, 953
 stress concentration, 943, 948
 thermal stress, 949
 vibration analysis, 951–952
- Finite-life region, 267
- Firbank, T. C., 863–864
- First-cycle yield (Langer), 297–300
- Fit, 383–388
- Fitted bearing, 605
- Fixed supports
 center load, 999
 intermediate load, 1000
 uniform load, 1000
- Fixed-pad thrust bearing, 639
- Flanged two-piece bearings, 638
- Flat belts, 860, 862, 863–878
 analysis, 868
 belting equation, 865, 867
 belt-tension schemes, 872
 crown height, 869, 871
 decision set, 873
 efficiency, 863
 Firbank's theory, 863–864
 flat metal belts, 875–878
 geometry, 860, 861
 initial tension, 872
 materials, 869
 pulley correction factor, 869, 871
 pulley sizes, 869
 tensions, 875
- Flat head screw, 410
- Flat metal belts, 875–878
- Flat springs, 500
- Flexible clutch and brake bands,
 824–825
- Flexible mechanical elements, 859–911
 belt. *See* Belt
 flexible shafts, 904–905
 inspection schedule, 860
 roller chain, 887–895. *See also* Roller
 chain
 wire rope, 896–904. *See also* Wire
 rope
- Flexible shafts, 904–905
- Flexural endurance limit, 319
- Flexure formula, 90
- Floating caliper brake, 829
- Floating shoe, 812, 813
- Fluctuating simple loads, 309, 338–339
- Fluctuating stress, 292–309, 330–334
- Fluid lubrication, 598
- Fluoroplastic group, 54
- Flywheel, 806, 846–851. *See also*
 Clutches, brakes, etc.
- Foams, 58
- Force analysis
 bevel gears, 689–692
 helical gears, 692–694
 power transmission system, 925
 spur gears, 685–689
 worm gears, 694–697
- Force fit, 385
- Forging, 43
- Form cutting, 667
- Formulated hot melt adhesive, 482
- Forrest, P. G., 325n
- Forys, Edward, 503n
- Fourier series, 147
- fps system, 21–22
- Fracture of inches (preferred sizes),
 1015
- Fracture mechanics, 231–240, 270–274
- Fracture toughness, 236
- Free running fit, 385
- Free-body diagram, 69
- Free-cutting brass, 53
- Frequency distribution, 959
- Frequency function, 959
- Fresche, J. C., 318n
- Frettage corrosion, 286
- Friction
 coefficient. *See* Coefficient of friction
 internal-friction theory, 219
- Friction drives, 875–878
- Friction variable, 618
- Frictional-contact axial clutch, 825–828
- Fuchs, H. O., 272n
- Full bearing, 605
- Full-film lubrication, 598
- Full-gasketed joints, 429
- Fully automated mesh generation, 943
- Fundamental deviation, 383
- G**
- Gamma function, 1038
- Gasketed joints, 429
- Gas-weld symbols, 459
- Gates Rubber Company, 880, 884
- Gauges, 1031–1032
- Gaussian distribution, 965–966,
 1001–1002
- Gear reducer, 70
- Gear train, 678–685
- Gears, 653–804
 bevel. *See* Bevel gears
 conjugate action, 657
 contact ratio, 664–665
 drawing gear teeth, 658–664
 finishing the tooth profiles, 670
 force analysis, 685–697. *See also*
 Force analysis
 forming of gear teeth, 667
 gear train, 678–685
 helical. *See* Spurs and helical gears
- hobbing, 669
- interference, 665–667
- involute properties, 658
- milling, 668
- nomenclature, 655–656
- power transmission system, 916–923
- shaping, 668–669
- spur. *See* Spur gears
- tooth systems, 676–678
- types, 654–655
- worm. *See* Worm gears
- General three-dimensional stress, 82–83
- Generating cutters, 667
- Generating line, 659
- Genetic properties, 1016–1018
 circle, 1016
 cylinder, 1018
 hollow circle, 1016
 hollow cylinder, 1018
 quarter-circle, 1017
 rectangle, 1016
 rectangular prism, 1018
 right triangle, 1017
 rods, 1018
 round disk, 1018
- Geometrix stress-concentration
 factor, 105
- Geometry factors
 bevel gears, 773, 774
 spur and helical gears, 731–736
- Gerber, 298
- Gerber failure criterion, 297–299
- Gere, J. M., 182n
- Gib-head key, 380
- Gilding brass, 52
- Glass, 58, 987
- Global instabilities, 182
- Goodier, J. N., 103n
- Goodman failure criterion, 297–299
- Goodman line, 297
- Gordon, S. A., 275, 322n, 1030
- Gough's data, 322
- Gravitational system of units, 21
- Gravity loading, 945
- Gray cast iron, 49, 106, 987, 1026
- Green, I., 415n, 416
- Grinding, 670
- Grip, 411
- Groove welds, 460
- Grooved pulleys, 860
- Grossman, M. A., 47n
- Grover, H. J., 275, 296, 322n, 1030
- Guest theory, 211
- H**
- Hagen-Poiseuille law, 600
- Hard-drawn wire, 506–508

1050 Mechanical Engineering Design

Hardness, 36–37
 Hardness-ratio factor
 bevel gears, 776, 777
 spur and helical gears, 741–742
 Haringx, J. A., 504n
 Haugen, E. B., 284n, 1029
 HD spring, 506–508
 Heading, 44
 Heat-treated steel, 44–47, 1021–1022
 Heavy hexagonal screws, 1034
 Helical coil compression springs. *See*
 Compression springs
 Helical coil extension spring, 524–532
 Helical coil torsion springs, 532–539
 bending stress, 534
 deflection, 534–536
 end location, 533–534
 fatigue strength, 536–537
 spring rate, 534
 static strength, 536
 where used, 533
 Helical gears, 654, 671–675, 692–694.
 See also Spur and helical gears
 Helical rollers, 552
 Helical springs. *See* Mechanical
 springs
 Helical-gear geometry factors, 734
 Helix angle, 672
 Hellan, Kåre, 231n
 Hertzian endurance strength, 320
 Hertzian stress, 117, 724
 Hexagonal nuts, 409, 1035
 Hexagonal socket head, 409, 410
 Hexagon-head bolt, 408, 409
 Hexagon-head cap screw, 409, 1034
 Heywood, R. B., 327n
 Heywood's parameter, 327
 Hidden cycle, 313, 314
 High-cycle fatigue, 267
 High-leaded brass, 53
 Hobbing, 669
 Holding power, 376
 Hole basis, 383
 Hollow circle, 1016
 Hollow cylinder, 1018
 Hooke's law, 29
 Hoop stress, 108
 Hopkins, Bruce R., 370n
 Horger, Oscar J., 279n, 280, 296, 518n
 Horizontal shear stress, 94
 Hot rolling, 43
 Hot-rolled (HR) steel, 1020
 Hot-working processes, 43
 HR steel, 1020
 Hrennikoff, A., 935n
 Hybrid materials, 58
 Hydraulic clutch, 812
 Hydrodynamic lubrication, 598
 Hydrodynamic theory, 605–609

Hydrostatic lubrication, 599
 Hypoid gears, 767, 768

I

Identification of need, 5–6
 Idle arc, 864
 Impact, 183–184
 Impact load, 37
 Impact properties, 37–39
 Impact value, 38
 Impact wrenching, 422
 Inch-pound-second system (ips), 21
 Inconel, 987
 Inconel alloy, 508
 Indexing, 514
 Indirect mounting, 571, 573
 Induction motor, 850
 Infinite-life region, 267
 Influence coefficients, 372
 Information sources, 9
 Injection molding, 668
 Instrument bearings, 553
 Interference, 240
 defined, 19
 gears, 665–667
 static loading, 244–246
 Interference fits, 385–388
 Intermediate load
 cantilever, 993
 fixed supports, 1000
 one fixed and one simple support,
 998
 simple supports, 995
 Internal expanding clutches/brakes,
 812–820
 Internal gear and pinion, 662, 663
 Internal shear force, 71
 Internal-friction theory, 219
 Internal-shoe device, 812–820
 International System of Units. *See*
 SI units
 International tolerance grades, 383, 384,
 1002, 1004
 Intersecting-shaft bevel-type gearings,
 768
 Invention of the concept, 6–7
 Investment casting, 42, 667
 Involute curve, 659
 Involute helicoid, 671
 Involute profile, 657
 Involute properties, 658
 Involute-toothed pinion and rack, 662
 ips system, 21–22
 Ishai, O., 55n
 IT numbers, 383, 384, 1002, 1004
 Ito, Y., 413n
 Izod notched-bar test, 38, 39

J

J. B. Johnson formula, 176
 Jackson, L. R., 275, 322n, 1030
 Jam nut, 410
 Jensen, J. K., 760n
 J-groove weld, 460
 Joerres, Robert E., 309, 507n, 508
 Johnson, J. E., 182n
 Johnston, E. R., Jr., 102n, 147n, 173n
 Joint, 395–497. *See also* Screws and
 fasteners–nonpermanent joints
 Jominy test, 47
 Journal, 598
 Journal bearings. *See* Lubrication and
 journal bearings
 Joyce worm-gear screw jack, 400
 Juvinal, R. C., 267, 294n

K

Karelitz, G. B., 625n
 Kelsey, S., 935n
 Kennedy, J. B., 325n
 Key, 378–382, 928–929
 Kilopound, 21
 Kinematic viscosity, 600
 Kinloch, A. J., 489
 Kip, 21
 Krause, D. E., 37n
 Kuguel, R., 281n
 Kurtz, H. J., 423n

L

L_{10} life, 554
 Labyrinth seal, 590
 Lamont, J. L., 47n
 Landgraf, R. W., 268n, 270n
 Langer line, 297–300
 Lang-lay ropes, 896
 Lapping, 670
 Law of action and reaction, 69
 $\text{lbf} \cdot \text{s}^2/\text{ft}$, 21
 $\text{lbf} \cdot \text{s}^2/\text{in}$, 21
 LCR helical gears, 732
 Lead, 396, 676, 987
 Lead angle, 676
 Lead-base babbitt, 637
 Leaded bronze, 637
 Leather, 869
 Lees, W. A., 489
 LEFM, 231, 270–274
 Leibensperger, R. L., 587n
 Lemmon, D. C., 625n
 Lengthwise curvature factor for bending
 strength, 773
 Levy, S., 935n

- Lewis bending equation, 714–723
 Lewis form factor, 717, 718
 Lewis, Wilfred, 714
 Light-duty toothed coupling, 845
 Limits, 19
 Limits and fits, 383–388
 Line elements, 937
 Line of action, 657, 659, 662
 Line of contact, 120
 Linear damage hypothesis, 566
 Linear damage theory, 564
 Linear elastic fracture mechanics (LEFM), 231, 270–274
 Linear regression, 974–977
 Linear sliding wear, 641–643
 Linear spring, 142
 Lined bushing, 638
 Link plates, 891
 Link-type V belts, 880
 Lipp, Robert, 665n, 674n
 Lipson, C., 279n, 280
 Little, R. E., 414n
 Load. *See* Load/loading
 Load and stress analysis, 67–139
 beams—bending stresses, 85–90
 beams—shear stresses, 90–95
 bending moments (beams), 71–72
 Cartesian stress components, 75–76
 contact stress, 117–120
 curved beams in bending, 112–116
 elastic strain, 83–84
 equilibrium, 68
 free-body diagrams, 69
 general three-dimensional stress, 82–83
 Mohr's circle, 76–82
 press and shrink fits, 110–111
 pressurized cylinders—stress, 107–109
 rotating rings—stress, 110
 shear force (beams), 71–72
 singularity functions, 73–75
 stress, 75
 stress concentration, 105–107. *See also* Stress concentration
 temperature effects, 111–112
 torsion, 95–104
 uniformly distributed stresses, 84–85
 Load factor, 425
 Load intensity, 71
 Load zone, 572
 Load-distribution factor
 bevel gears, 773
 spur and helical gears, 739–740
 Loading factor, 282
 Load/loading
 ball bearings—combined radial and thrust loading, 559–564
 ball bearings—variable loading, 564–568
 central. *See* Central loading
 critical buckling load, 949–951
 direct load, 440
 eccentric. *See* Eccentric loading
 end load, cantilever, 993
 fatigue. *See* Fatigue loading
 FEA, 944–945, 949–951
 impact load, 37
 intermediate load. *See* Intermediate load
 journal bearings, 636–638
 overhanging load, simple supports, 997
 proof load, 417
 reverse loading, 780
 shear. *See* Shear, moment and deflection of beams
 static load, 206. *See also* Failure—static loading
 suddenly applied loading, 184–186
 transmitted load, 686, 689, 693
 twin loads, simple supports, 997
 uniform load. *See* Uniform load
 variable load. *See* Fatigue failure—variable loading
 Load-sharing ratio, 733
 Load-stress factor, 320
 Local instabilities, 182
 Locational clearance fit, 385
 Locational interference fit, 385
 Locational transition fit, 385
 Logan, D. L., 953n
 Logarithmic strain, 68
 Lognormal distribution, 967–969
 Long-time creep test, 39
 Loose running fit, 385
 Loose-side tension, 864
 Low brass, 53
 Low-contact-ratio (LCR) helical gears, 732
 Low-cycle fatigue, 267
 Lower deviation, 383
 Low-leaded brass, 53
 Lubricant, 598
 Lubricant flow, 619–621
 Lubricant sump, 621, 622, 625
 Lubricant temperature rise, 622–624
 Lubrication and journal bearings, 597–651. *See also* Rolling-constant bearings
 angular speed, 610
 boundary-lubricated bearings, 640–648. *See also* Boundary-lubricated bearings
 bushing, 638
 clearance, 628–630
 coefficient of friction, 618, 619
 design, 609–625
 film pressure, 621–622
 fitted bearing, 605
 full bearing, 605
 groove patterns, 638, 639
 hydrodynamic theory, 605–609
 interpolation, 624–625
 loads, 636
 lubricant flow, 619–621
 lubricant temperature rise, 622–624
 materials, 637–638
 minimum film thickness, 616–618
 nomenclature, 604
 partial bearing, 604, 605
 Petroff's equation, 601–603
 pressure-fed bearings, 630–636
 radial clearance, 628–630
 Raimondi-Boyd analysis, 611–612, 616–625
 relationships between variables, 609–610, 611–625
 roller bearings, 587–588
 self-contained bearings, 625–628
 stable lubrication, 603–604
 thick-film lubrication, 604–605
 thrust bearings, 639, 640
 Trumpler's design criteria, 610–611
 types of lubrication, 598–599, 640–641
 viscosity, 599–601
 viscosity charts, 612–615
 Lüder lines, 211
- M**
 M profile, 396, 397
 Mabie, H. H., 723n
 Macaulay functions, 72–75, 150–156
 Macaulay, W. H., 72n
 McHenry, D., 935n
 Machine-screw head styles, 409, 410
 McKee, S. A., 603n
 McKee, T. R., 603n
 McKee abscissa, 603
 Magnesium, 52, 987
 Magnesium alloys, 52
 Magnetic clutch, 812
 Major diameter, 396, 397
 Major Poisson's ratio, 56
 Malkus, D. S., 953n
 Malleable cast iron, 50
 Manganese, 48
 Manson, S. S., 318n
 Manson method, 318
 Manson-Coffin relationship, 270
 Manual-control shaft, 904
 Margin of safety, 240
 Marin equation, 279
 Marin factors, 278–286, 323–326. *See also* Endurance limit
 Marin, Joseph, 222n, 279n
 Marin loading factor, 325, 326
 Marshak, K. M., 294n

- Martensite, 45, 46, 275
 Martin, H. C., 936n
 Material efficiency coefficient, 60
 Material families and classes, 57–58
 Material index, 61
 Material selection, 56–63
 Materials, 27–65
 alloy steels, 47–48
 aluminium. *See* Aluminum
 belt drives, 869
 boundary-lubricated bearings, 641
 brakes/clutches, 841–844
 cast iron, 41, 49–50. *See also* Gray
 cast iron
 casting, 49–51
 cold working, 33–35
 cold-working processes, 44
 composite, 55–56
 corrosion-resistant steels, 48–49
 finite life fatigue tests, 1029
 flat metal belts, 877
 hardness, 36–37
 heat-treated steel, 44–47
 hot-working processes, 43
 impact properties, 37–39
 investment casting, 42
 journal bearings, 636–638
 nonferrous metals, 51–54
 numbering systems, 40–41
 physical constants, 987
 plastics, 54–55
 powder-metallurgy process, 42–43
 sand casting, 41–42
 selection, 56–63
 shaft, 348–349
 shell molding, 42
 spring, 505–510
 stainless steel. *See* Stainless steel
 statistical significance, 32
 steel. *See* Steel
 stochastic yield, 1028
 strength and stiffness, 28–31
 temperature effects, 39–40
 ultimate strength, 1028
 wire rope, 897
 Materials selection charts, 57
 Matrix, 55
 Matthews, F. L., 489
 Maximum load, 618
 Maximum-normal-stress (MNS) theory, 226–227
 Maximum-shear-stress (MSS) theory, 211–212
 Maxwell's reciprocity theorem, 194, 372
 Mean coil diameter, 500
 Mechanical engineering design, 5
 Mechanical springs, 499–547
 Belleville springs, 539, 540
 compression springs. *See*
 Compression springs
 conical spring, 540
 constant-force spring, 540, 541
 critical frequency, 516–518
 curvature effect, 501–502
 deflection, 502
 extension springs, 524–532
 materials, 505–510
 spring ends, 503, 525
 stability, 504
 stresses, 500–501
 surge, 516–518
 torsion springs, 532–539. *See also*
 Helical coil torsion springs
 translational vibration, 516
 volute spring, 540, 541
 Median life, 554
 Medium drive fit, 385
 Member stiffness, 413–417
 Mesh, 942
 Mesh density, 942
 Mesh generation, 941
 Mesh refinement, 942
 Metal belts, 875–878
 Metal spraying, 286
 Metal-mold castings, 42
 Metals, 57
 Metric system. *See* SI units
 Metric threads, 397, 398
 Microreyn (μreyn), 600
 Millimeters (preferred sizes), 1015
 Milling, 668
 Miner, M. A., 314n
 Miner rule, 314–317, 884
 Minimum coefficient of friction, 618
 Minimum film thickness, 604, 605,
 616–618
 Minimum life, 554
 Minimum parasitic power loss, 618
 Minimum weld-metal properties, 472
 Minor diameter, 396, 397
 Minor Poisson's ratio, 56
 Miscellaneous-effects factor, 285–286
 Mischke, Charles R., 35n, 46n, 47n,
 147n, 165n, 167n, 228n, 275n,
 280n, 322n, 349n, 370n, 379n,
 480n, 507n, 508, 738n, 971n,
 1023
 Mitchiner, R. G., 723n
 Mixed-film lubrication, 640–641
 MJ profile, 396–397
 MM theory, 227–228
 $\mu\text{N/P}$, 603
 MNS theory, 226–227
 Modal analysis, 951–952
 Mode I crack, 233
 Mode I, plane strain fracture
 toughness, 236
 Modern Steels and Their Properties
 Handbook, 47
 Modified Goodman diagram, 295
 Modified Goodman failure criterion,
 297–299
 Modified Goodman line, 298
 Modified Mohr (MM) theory, 227–228
 Modified Neuber equation, 327
 Modified phenolic adhesive, 482
 Module, 656
 Modulus of elasticity, 29, 83
 Modulus of resilience, 65
 Modulus of rigidity, 31
 Modulus of rupture, 31
 Modulus of toughness, 65
 Mohr theory of failure, 219
 Mohr's circle, 76–82
 Mohr's circle diagram, 78, 79
 Molded-asbestos lining, 843
 Molded-asbestos pads, 843
 Molybdenum, 48, 987
 Moment. *See* Shear, moment and
 deflection of beams
 Moment connection, 464
 Moment load, 441
 cantilever, 994
 simple supports, 996
 Moment of area, 86
 Moment-area method, 147
 Monel metal, 987
 Monte Carlo computer simulations, 21
 Mounting antifriction bearings, 571,
 573, 587–590
 μreyn , 600
 MSC/NASTRAN, 953
 MSS theory, 211–212
 Multiple-threaded, 396
 Multipoint constraint equations, 946
 Muntz metal, 53
 Murakami, Y., 234n
 Music wire, 506–508
- N**
 Nachtigall, A. J., 318n
 Nagata, S., 413n
 NASA/FLAGRO 2.0, 273
 NASTRAN, 934
 Naval brass, 53
 Neale, M. J., 630
 Necking, 30
 Needle bearings, 552, 553
 Neuber constant, 288
 Neuber equation, 288
 Neutral axis, 85
 Neutral plane, 85
 Neville, A. M., 325n
 Newmark, N. M., 935n
 Newton (N), 21

- Newtonian fluids, 600
 Newton's cooling model, 838
 Newton's energy loss equation, 838–839
 Newton's third law, 69
 Newton's viscous effect, 599
 Nickel, 48
 Nickel silver, 987
 Nickel steel, 987
 Nine-hoist problem, 901–902
 Nitralloy, 731
 Nitriding, 730
 Nodal loads, 945
 Node, 935, 937
 Nodular cast iron, 50
 Noll, C. J., 279n, 280
 Nominal mean stress method, 294
 Nominal size, 19
 Nominal stress, 105
 Nominal stresses/strengths, 31
 Nonferrous metals, 51–54
 Nonlinear softening spring, 142, 143
 Nonlinear stiffening spring, 142
 Nonpermanent joints. *See* Screws and fasteners—nonpermanent joints
 Nonprecision bearings, 553
 Nonreversing open belt, 861
 Nonsinusoidal fluctuating stress, 293
 Normal circular pitch, 672
 Normal coupling equation, 241
 Normal diametral pitch, 672
 Normal distribution, 965–966, 1001–1002
 Normal stress, 75
 Normalizing, 45
 Norris, C. H., 462n
 Notch sensitivity, 287–292, 326–330
 Notched-bar tests, 38
 Notch-sensitivity charts, 287, 288
 Numbering systems, 40–41
 Numerical integration, 147
 Nylon, 54
-
- Octahedral shear stress, 215
 Octahedral surfaces, 216
 Octahedral-shear-stress theory, 215
 Offset method, 29
 Offset-shaft bevel-type gearings, 768
 Oil quench, 45
 Oil-actuated multiple-disk clutch-brake, 826
 Oiles bearings, 641
 Oiliness agents, 640
 Oilite bearings, 641
 Oil-tempered wire, 506–508
 One fixed and one simple support
 center load, 998
 intermediate load, 998
 uniform load, 999
- One-dimensional flow, 609
 Open thin-walled sections, 103–104
 Open-belt drive, 861, 863
 Opening crack propagation mode, 233
 QQ&T wire, 506–508
 Osgood, C. C., 414n
 Oval head screw, 410
 Overhanging load, simple supports, 997
 Overload factor
 bevel gears, 771
 spur and helical gears, 738
 Overload release clutch, 844, 845
 Overview of book, 4
- P**
- P, 600
 Palmgren, A., 314n
 Palmgren-Miner cycle-ratio summation rule, 314
 Parabolic formula, 176
 Parallel fillet welds, 463
 Parallel helical gears, 671–675. *See also* Spur and helical gears
 Parent distribution, 967
 Paris, P. C., 231n, 234n
 Partial bearing, 604, 605
 Particulate composite, 56
 Partitioning, 941
 Pa-s, 600
 Pascal-second (Pa-s), 600
 PDF, 959
 Pedestal bearings, 625
 Performance factors, 610
 Permanent joints. *See* Welding and bonding—permanent joints
 Permanent-mold casting, 667
 Peterson, R. E., 210, 723n. *See also* Pilkey, Walter D.
 Petroff's bearing model, 602
 Petroff's equation, 602
 Phenolics, 55
 Phenylene oxide, 54
 Phosphor bronze, 53, 987
 Phosphor-bronze wire, 507, 508
 Physical constants of materials, 987
 Piecewise differential equations, 184
 Pilkey, Walter D., 210n, 234n, 380n, 429n, 948n
 Pillow-block bearings, 625
 Pin, 378–379
 Pinion, 655, 656
 Pinion cutter, 668
 Piotrowski, George, 467n
 Pipe (American Standard Pipe), 1019
 Pitch, 396, 397
 Pitch circle, 655, 656, 657
 Pitch diameter, 396, 397, 655, 656, 675
 Pitch length, 880
- Pitch point, 657, 659
 Pitch radius, 657
 Pitch-line velocity, 687, 691, 698
 Pitting, 723
 Pitting resistance geometry factor, 734, 773, 774
 Pitting resistance stress-cycle factor, 743
 Plane slider bearing, 606
 Plane stress, 76
 Plane-stress transformation
 equations, 76
 Planetary gear trains, 683, 684
 Plastics, 54–55
 Plastic-strain line, 270
 Plesha, M. E., 953n
 Pneumatic clutch, 812
 Pocius, A. V., 481, 489
 Poise (P), 600
 Poisson's ratio, 56, 63, 84, 387, 724, 876
 Polyamide, 869
 Polycarbonate, 54
 Polyester, 54
 Polyimide, 54
 Polyimide adhesive, 482
 Polymeric adhesives, 481
 Polymers, 58
 Polyphenylene sulfide, 54
 Polystyrene group, 54
 Polysulfone, 54
 Polyvinyl chloride, 54
 Pope, J. A., 322n
 Population, 960
 Positioning drives, 875
 Potential energy, 156
 Pound-force, 21
 Powder-metallurgy process, 42–43, 667
 Power screws, 400–408
 Power transmission case study, 913–931
 bearings, 927–928
 design requirements, 23
 design sequence, 915–916
 design specifications, 24
 final analysis, 931
 force analysis, 925
 gears, 916–923
 key, 928–929
 power requirements, 916
 retaining ring, 929–931
 shaft design for deflection, 926–927
 shaft design for stress, 926
 shaft layout, 923–925
 shaft material selection, 925
 torque, 916
 Power-drive shaft, 904
 Preferred sizes, 1015
 Preload, 421, 425–428
 Preloading, 590
 Presentation, 7

- Presetting, 503
Press and shrink fits, 110–111, 353
Pressure angle, 659
Pressure line, 659
Pressure-fed bearings, 630–636
Pressure-sensitive adhesives, 482
Pressurized cylinders, 107–109
Pretension, 411
Primary shear, 440, 464
Principal directions, 77
Principal distribution, 967
Principal shear stresses, 83
Principal stresses, 77
Probability density, 32
Probability density function (PDF), 32, 959
Probability distribution, 959, 965–972
Probability function, 959
Problems, answers, 1039–1043
Product liability, 15
Professional responsibilities, 10–11
Professional societies, 11
Proof load, 417
Proof strength, 417
Propagation of dispersion, 19
Propagation of error, 19, 972–974
Propagation of uncertainty, 19
Proportional limit, 29
Protein-based adhesive, 482
Puck-pad caliper brake, 832, 833
Pugh method, 7n
Pugh, Stuart, 7n
Pulley correction factor, 869, 871
Pulsating torsional fatigue, 309
Punch press, 849–850
Pure compression, 84
Pure shear, 84
Pure tension, 84
PVAc emulsion adhesive, 482
- Q**
Quarter-circle, 1017
Quarter-twist belt drive, 862
Quasi-static fracture, 232
Quenching, 45
- R**
R. R. Moore high-speed rotating-beam machine, 266
Rack, 662
Rack cutter, 668, 669
Radial clearance, 19, 604, 628–630
Radial clearance ratio, 602
Radial interference, 110
Raimondi, Albert A., 611–612
Raimondi-Boyd analysis, 611–612, 616–625
Rain-flow counting technique, 314
Random experiment, 958
Random variables, 958
Randomly oriented short fiber composite, 56
Rao, S. S., 952n
Rating life, 554
Rayleigh's equation, 371
RB&W, 426–427, 447
Real numbers, 22
Rectangle, 1016
Rectangular prism, 1018
Red brass, 52
Reddy, J. N., 953n
Reece, C. K., 760n
Reemsnyder, Harold S., 272n, 273
Regression, 974–977
Regular-lay ropes, 896
Relatively brittle, 231
Reliability, 18–19, 240
Reliability factors, 284, 285
 bevel gears, 777, 778
 spur and helical gears, 743, 744
Reliability method of design, 19
Remote-control shaft, 904
Renard numbers, 1015
Repeated stress, 293
Residual stress, 285
Residual stress method, 294
Resistance welding, 480
Retaining ring, 382, 929–931
Reverse loading, 780
Reversing crossed belt, 861
Reversing open-belt drive, 861
Reyn, 600
Reynolds equation for one-dimensional flow, 609
Reynolds, Osborne, 600, 605–606
Right triangle, 1017
Right-hand rule, 396
Rigid elements, 946
Rim clutches/brakes, 812–820
Rim-thickness factor, 744–745
Ring gear, 662
Rippel, Harry C., 639n
Riveted and bolted joints loaded in shear, 435–443
Roark's formulas, 147
Rockwell hardness, 36
Rockwell hardness scales, 36
Rods, 1018
Rolfe, S. T., 272
Roll threading, 44
Roller chain, 887–895
 capacities, 890–891
 chain velocity, 889
 dimensions, 888
 failure, 890
 horsepower capacity, 891–892
 link plates, 891
 lubrication, 895
 maximum speed, 894
 multiple-strand factors, 893
 nomenclature, 887
 sprocket, 889
 tooth correction factors, 893
 tooth counts, 892
Rolling bearings. *See* Rolling-constant bearings
Rolling-constant bearings, 549–595. *See also* Lubrication and journal bearings
 bearing-life recommendations, 563
 boundary dimensions, 560
 catalog load rating, 554
 combined radial and thrust loading, 559
 design assessment, 582–586
 dimensions/load ratings, 561, 562
 distributional curve fit, 555
 equivalent radial load, 559, 560
 fatigue criterion, 553
 life measures, 553–554
 load life at rated reliability, 554–555
 load-application factors, 563
 load-life-reliability relationship, 557–558
 lubrication, 587–588
 matters of fit, 586
 mounting, 571, 573, 587–590
 reliability-life relationship, 554–557
 sealing methods, 590–591
 selection of ball and cylindrical roller bearings, 568–571
 tapered roller bearings. *See* Tapered roller bearings
 types of bearings, 550–553
 variable loading, 564–568
Rolovic, R. D., 210n
Rope. *See* Wire rope
Rotating ring, 110
Rothbart, H. A., 407, 408
Rotscher's pressure-cone method, 414
Round belts, 860. *See also* Flat belts
Round disk, 1018
Round head screw, 410
Round key, 378
Round pin, 378
Round tubing, 992
Rounding off, 22
R-series numbers, 1015
Rubber-based adhesive, 482
Rubber-modified acrylic adhesive, 482
Rubber-modified epoxy adhesive, 482
Russell, Burdsall & Ward Inc. (RB&W), 426–427, 447

S

- SAE approximate, 276
 SAE Fatigue Design and Evaluation Steering Committee report, 268–270
 SAE specifications (steel bolts), 418
 Safety factors, 240, 299, 300
 bevel gears, 771
 spur and helical gears, 745
 wire rope, 898–899
 Saint-Venant, Jean Claude, 97, 944
 Salakian, A. G., 462n
 Salmon, C. G., 182n
 Samónov, Cyril, 501n, 502n, 504n
 Sample, 960
 Sample mean, 960
 Sample space, 958
 Sample standard deviation, 961
 Sample variance, 960
 Sand casting, 667
 Sand casting, 41–42
 Sand-cast gears, 790
 Saybolt universal viscosimeter, 600
 Saybolt universal viscosity (SUV), 600
 Scale (of spring), 502
 Scarf lap joint, 483
 Schmidt, Richard J., 117n, 215n
 Schwerdlin, Howard B., 738n
 Scoring, 723
 Screw bearing pressure, 407
 Screw threads, 396–400
 Screws and fasteners—nonpermanent joints, 395–456
 bolt strength, 417–421
 bolt torque/bolt tension, 422–425
 bolted and riveted joints loaded in shear, 435–443
 fastener stiffness, 410–413
 fatigue loading of tension joints, 429–435
 gasketed joints, 429
 member stiffness, 413–417
 power screws, 400–408
 preload, 421, 425–428
 shear joints with eccentric loading, 439–443
 statically loaded tension joint with preload, 425–428
 tension joints—external load, 421–422
 thread standards/definitions, 396–400
 threaded fasteners, 408–410
 Sealant, 481. *See also* Adhesive bonding
 Sealed bearing, 551
 Sealing methods (bearings), 590–591
 Seam welding, 480
 Secant column formula, 177
 Secondary shear, 441, 464
 Section modulus, 86
 Seireg, A. S., 615
 Self-acting/self-locking phenomenon, 402, 809
 Self-aligning bearing, 551, 559
 Self-aligning thrust bearing, 551
 Self-contained bearings, 625–628
 Self-deenergization, 807
 Self-energization, 807, 829
 Self-locking, 402, 809
 Semiautomatic mesh generation, 943
 Set removal, 503
 Setscrews, 376–378
 Shaft, 347–394
 assembly/disassembly, 353–354
 axial layout of components, 351
 critical speeds, 371–376
 defined, 348
 deflection, 367–370
 deviations, 1003, 1005
 fundamental durations, 1003, 1005
 keys, 378–382
 layout, 349
 limits and fits, 383–388
 materials, 348–349
 pins, 378–379
 power transmission system, 923–927
 retaining ring, 382
 setscrews, 376–378
 stress, 354–367
 stress concentration, 360–361
 supporting axial loads, 351
 torque transmission, 351–353
 Shaft basis, 384
 Shaft couplings, 845
 Shaping, 668–669
 Shaving, 670
 Shear. *See also* Shear stress
 beams. *See* Shear, moment and deflection of beams
 deflection of beams
 internal shear force, 71
 MSS theory, 211–212
 primary, 440, 464
 pure, 84
 secondary, 441, 464
 Volkersen shear-lag model, 483, 486, 487
 Shear, moment and deflection of beams, 993–1000
 cantilever—end load, 993
 cantilever—intermediate load, 993
 cantilever—moment load, 994
 cantilever—uniform load, 994
 fixed supports—center load, 999
 fixed supports—intermediate load, 1000
 fixed supports—uniform load, 1000
 one fixed and one simple support—center load, 998
 one fixed and one simple support—intermediate load, 998
 one fixed and one simple support—uniform load, 999
 simple supports—center load, 995
 simple supports—intermediate load, 995
 simple supports—moment load, 996
 simple supports—overhanging load, 997
 simple supports—twin loads, 997
 simple supports—uniform load, 996
 Shear force (beams), 71–72
 Shear joints with eccentric loading, 439–443
 Shear loading of bolted/riveted connection, 435–443
 Shear modulus, 31
 Shear stress
 beams in bending, 90–95
 horizontal, 94
 octahedral, 215
 principal, 83
 tangential, 75
 vertical, 94
 Shear tear-out, 436
 Shear-energy theory, 215
 Shear-lag model, 483
 Shear-stress correction factor, 501
 Sheet-metal gauges, 1031–1032
 Shell molding, 42, 667
 Shigley, Joseph E., 35n, 46n, 47n, 147n, 165n, 167n, 275n, 349n, 370n, 379n, 480n, 507n, 508, 735n, 738n, 971n, 1023
 Shock, 183–184
 Short compression members, 180–181
 SI units, 21–22
 conversion factors, 986
 deflection, 987
 deviations—shafts, 1003
 international tolerance grades, 1002
 prefixes, 985
 stress, 987
 washers, 1037
 Sib, G. C., 234n
 Significance figures, 22
 Silicon, 48
 Silicon bronze, 53
 Silicones, 55
 Silver plus overlay, 637
 Simple compression, 84, 85
 Simple supports
 center load, 995
 intermediate load, 995
 moment load, 996
 overhanging load, 997
 twin loads, 997
 uniform load, 996
 Sines failure criterion, 518
 Sines, George, 287

- Single bevel weld, 460
 Single V-groove weld, 460
 Single-enveloping worm-gear set, 655, 675
 Single-lap joint, 483
 Single-row bearings, 552
 Single-row deep-groove bearings, 550
 Singularity functions, 73–75
 Sintered-metal pads, 843
 Sinusoidal fluctuating stress, 293
 Size factor, 279–280
 bevel gears, 773
 spur and helical gears, 739
 Sizes, preferred, 1015
 Sleeve bearings. *See* Lubrication and journal bearings
 Sleeve bushings, 638
 Slenderness ratio, 174
 Sliding bearings. *See* Lubrication and journal bearings
 Sliding fit, 384, 385
 Sliding mode, 233
 Slug, 21
 Smith, G. M., 517n
 Smith, James O., 309n
 Smith-Dolan failure criterion, 331
 Smith-Dolan locus, 306
 S-N diagram, 266–267
 Snug-tight condition, 422
 Socket setscrews, 377
 Soderberg failure criterion, 297–298
 Soderberg line, 298
 Softening spring, 142, 143
 Solid bushing, 638
 Solid elements, 938
 Solid-film lubricant, 599
 Sommerfeld, A., 609n
 Sommerfeld number, 602, 610, 617, 634
 Sorem, J. R., Jr., 210n
 Sources of information, 9
 Special-purpose elements, 938
 Speed ratio, 734
 Spherical contact, 117–118
 Spherical-roller thrust bearing, 552, 553
 Spinning, 44
 Spiral angle, 766
 Spiral bevel gears, 766–768
 Spiroid gearing, 767, 768
 Splines, 353
 Split tubular spring pin, 378
 Spot welding, 480
 Spotts, M. E., 884n
 Spring. *See also* Mechanical springs
 classification, 500
 defined, 142
 linear, 142
 softening, 142, 143
 stiffening, 142
 Spring constant, 143
 Spring ends, 503, 525
 Spring materials, 505–510
 Spring rate, 411, 502
 Spring surge, 516
 Spring wires, 505–508
 Spur and helical gears, 654, 671–675, 713–763. *See also* Gears
 AGMA strength equations, 727–731
 AGMA stress equations, 725–726
 AGMA symbols, 715–716
 analysis, 745–755
 bending equations (summary), 746
 crossed helical gears, 789. *See also* Worm gears
 design of gear mesh, 755–760
 dynamic factor, 736–738
 elastic coefficient, 736, 737
 force analysis (helical gears), 692–694
 force analysis (spur gears), 685–689
 geometry factors, 731–736
 hardness-ratio factor, 741–742
 Lewis bending equation, 714–723
 load-distribution factor, 739–740
 overload factor, 738
 parallel helical gears, 671–675
 reliability factors, 743, 744
 rim-thickness factor, 744–745
 safety factors, 745
 size factor, 739
 stress cycle factors, 742, 743
 stresses/strengths, 725–731, 746, 750, 752–753
 surface condition factor, 738
 surface durability, 723–725
 temperature factor, 744
 tooth system, 676, 677
 wear equations (summary), 747
 Spur-gear geometry factors, 733
 Square bolts, 1033
 Square butt-welded, 460
 Square key, 379
 Square threads, 398, 399
 Square-jaw clutch, 844, 845
 St, 600
 Stable lubrication, 603–604
 Stage I fatigue, 258, 270
 Stage II fatigue, 258–259, 270
 Stage III fatigue, 259, 271
 Stainless steel
 friction drives, 876
 major characteristics, 48
 physical constants, 987
 springs, 507, 508
 tensile tests, 1023
 types, 48–49
 UNS designations, 41
 Stamping, 44
 Standard, 12
 Standard deviation, 961
Standard Handbook of Machine Design, 47
 Standard sizes, 13
 Standard-setting organizations, 12
 Starch-based adhesive, 482
 Static equilibrium, 68
 Static load, 37, 206. *See also* Failure—static loading
 Static strength, 208–209
 Statically indeterminate problems, 168–173
 Statically loaded tension joint with preload, 425–428
 Statistical considerations, 957–982
 arithmetic mean, 960
 basic structures, 959, 960
 Gaussian distribution, 965–966, 1001–1002
 linear regression, 974–977
 lognormal distribution, 967–969
 normal distribution, 965–966, 1001–1002
 notation, 962
 probability distributions, 965–972
 propagation of error, 972–974
 random variables, 958
 standard deviation, 961
 uniform distribution, 969–970
 variance, 960
 Weibull distribution, 970–972
 Statistical tolerance system, 20
 Steel
 alloy, 47–48
 ASTM minimum values, 1020
 carbon, 1030
 cast, 51
 corrosion-resistant, 48–49
 heat treatment, 44–47
 heat-treated, 1021
 numbering system, 40–41
 springs, 505–508
 stainless. *See* Stainless steel
 stress-strain properties, 1024–1025
 tensile tests, 1023
 Steel bolts, 417–421
 Steep-angle tapered roller, 552
 Step lap joint, 483
 Stephens, R. I., 272n
 Stiffening spring, 142
 Stiffness, 28–31. *See also* Deflection and stiffness
 fastener, 410–413
 member, 413–417
 tension joints - external load, 422
 Stiffness constant, 421
 Stochastic analysis, 17. *See also* Statistical considerations
 design factor in fatigue, 334–336

- endurance limit, 322–326
 fluctuating stresses, 330–334
 interference, 244–246
 normal-normal case, 242–244
 notch sensitivity, 326–330
 static loading, 240–246
 stress concentration, 326–330
 variable loading, 322–336
 Stochastic variable, 962
 Stock key, 379
 Stoke (St), 600
 Straight bevel gears, 670–671, 689, 766.
 See also Bevel gears
 Straight roller bearings, 552
 Straight two-piece bearings, 638
 Strain
 elastic, 83–84
 stress-strain curve, 209
 stress-strain diagram, 29–31
 true, 30
 Strain energy, 156–158
 Strain-hardened, 34
 Strain-life method, 268–270
 Strength, 15–16
 bevel gears, 768–771, 781
 bolt, 417–421
 cold work, and, 33–35
 compressive, 30–31
 contact, 320
 fatigue, 267, 275–278
 proof, 417
 spur and helical gears, 727–731, 737,
 750, 753
 static, 208–209
 surface fatigue, 267, 275–278
 tensile, 29, 30–31
 torsional, 31
 welded joints, of, 471–473
 worm gears, 789–792
 Strength *versus* density, 62, 63
 Strength *versus* temperature chart, 39
 Strength-to-stress ratio, 238
 Stress, 16. *See also* Load and stress
 analysis
 bearing, 437
 bending. *See* Bending stress
 bevel gears, 768–771, 778–782,
 787–788
 Cartesian coordinate system, 75–76
 compressive, 75, 182
 contact, 117–120
 fluctuating, 292–309, 330–334
 helical springs, 500–501
 Hertzian, 117
 hoop, 108
 nominal, 105
 normal, 75
 plane, 76
 power transmission system, 926
 pressurized cylinders, 107–109
 principal, 77
 residual, 285
 rotating rings, 110
 shaft, 354–367
 shear. *See* Shear stress
 SI units, 987
 spur and helical gears, 725–731, 736
 symbols, 16
 tensile, 75
 thermal, 949
 three-dimensional, 82–83
 true, 30
 uniform distribution, 84–85
 von Mises, 214
 welded joints in bending, 469–471
 welded joints in torsion, 464–468
 Stress analysis. *See* Load and stress
 analysis
 Stress concentration, 105–107
 bolted and riveted joints loaded in
 shear, 436
 fatigue loading of tension joints, 429
 FEA, 943, 948
 keys, 380
 retaining ring, 382
 shaft, 360–361
 splines, 353
 static loading, 106, 209–210
 stochastic analysis, 326–330
 tables, 1006–1014
 variable loading, 287–292, 326–330
 welded joints, 472
 Stress correction factor, 733
 Stress cycle factors
 bevel gears, 775, 776
 spur and helical gears, 742, 743
 Stress intensity factor, 234
 Stress intensity modification factor, 234
 Stress raisers, 105
 Stress relieving, 46
 Stress-concentration factors, 105,
 1006–1014
 Stress-life method, 266–268
 Stress-strain curve, 209
 Stress-strain diagram, 29–31
 Stress-strength comparison, 15–16
 Strict liability, 15
 Structural adhesives, 481
 Structural-steel angles, 988–989
 Structural-steel channels, 990–991
 Strut, 180–181
 Stud, 411
 Subsidiary distribution, 967
 Suddenly applied loading, 184–186
 Superimposition, 147–150
 Surface elements, 938
 Surface endurance shear, 319
 Surface endurance strength, 320
 Surface factor, 279
 Surface fatigue strength, 319–322
 Surface loading, 945
 Surface-strength geometry factor,
 734–736
 Surge of helical springs, 516–518
 SUV, 600
 Synthesis, 7
 Synthetically designed hot melt
 adhesive, 482
- T**
 Tada, H., 231n, 234n
 Tangential shear stress, 75
 Tape drives, 875
 Taper pin, 378
 Tapered fits, 353
 Tapered roller bearings, 550, 552, 553,
 571–583
 components, 571
 dynamic equivalent radial loads,
 578–579
 form, 571–572
 indirect/direct mounting, 573
 load-life-reliability relationship,
 573–583
 nomenclature, 572
 notation, 572, 574–575
 power transmission systems, 927–928
 Timken catalog pages, 574–575
 Tavernelli, J. F., 270n
 Taylor, R. L., 953n
 Tearing mode, 233
 Tearing of member, 436, 437
 Temper carbon, 50
 Temperature
 boundary-lubricated bearings, 646–648
 clutches, brakes, etc., 837–841
 journal bearings, 622–624
 load and stress analysis, 111–112
 materials, and, 39–40
 Temperature factor, 282–284
 bevel gears, 776
 spur and helical gears, 744
 Tempered martensite, 46
 Tempering, 46
 Tensile strength, 29, 30–31
 Tensile strength correlation method, 322
 Tensile stress, 75
 Tensile tear-out, 436
 Tensile-stress area, 397
 Tension joints—external load, 421–422
 T-groove weld, 460
 Theoretical stress-concentration factor,
 105, 1006–1014
 Thermal loading, 945
 Thermal stress, 949
 Thermoplastics, 54

- Thermoset, 54, 55
Thick-film lubrication, 604–605
Thin flat metal belts, 875–878
Thin-film bearings, 641
Thin-film lubrication, 640
Thin-walled vessels, 108–109
Thomson, William T., 184n, 371n, 372n
Thread angle, 396, 397
Thread standards/definitions, 396–400
Threaded fasteners, 408–410
Thread-sealing adhesives, 481
3-D truss element, 939
Three-dimensional stress, 82–83
Three-jaw coupling, 845
Three-parameter Weibull distribution, 970
Through-hardening, 782
Thrust bearings, 551, 639, 640
Thrust-collar friction coefficients, 408
Tight-side tension, 864
Timing belts, 860, 862–863, 886–887
Timing or positioning drives, 875
Timken catalog pages, 574–575
Timkin Company, 553–555, 571–579
Timoshenko, S. P., 97n, 103n, 182n
Tin-base babbitt, 637
Tipton, S. M., 210n
Titanium, 52
Titanium alloys, 987, 1027
Tolerance
 absolute tolerance system, 20
 bilateral, 19
 defined, 19, 383
 large, 13
 IT numbers, 383, 384, 1002, 1004
 statistical tolerance system, 20
 unilateral, 19
Tolerance grades, 383, 384, 1002, 1004
Tolerance position letters, 384
Tooth systems, 676–678
Tooth thickness, 655, 656
Toothed wheels, 860
Top land, 656
Topp, L. J., 936n
Torque
 bolt, 422–425
 power transmission systems, 916
 shaft, 351–353
Torque coefficient, 423
Torque transmission, 351–353
Torque vector, 95
Torque wrenching, 422
Torque-twist diagram, 31
Torsion, 95–104
 closed thin-walled tubes, 102
 defined, 95
 helical coil torsion springs, 532–539
 open thin-walled sections, 103–104
 tension, compression, 143
 welded joints, 464–468
 Torsion springs, 532–539. *See also*
 Helical coil torsion springs
 Torsional fatigue strength (fluctuating stress), 309
 Torsional properties (fillet welds), 466
 Torsional strengths, 31
 Torsional yield strength, 31
 Total strain amplitude, 270
Toughness, 65
Tower, Beauchamp, 605–606
Toyoda, J., 413n
Train value, 679
Transition fits, 385
Transmission accuracy number, 772
Transmission of power. *See* Power transmission case study
Transmitted load, 686, 689, 693
Transverse circular pitch, 672, 675
Transverse fillet weld, 461
Tredgold's approximation, 671
Tresca theory, 211
Trimetal 77, 637
Trimetal 88, 637
Triple-threaded, 396
Truarc Co., 929
True strain, 30
True stress, 30
True stress-strain diagram, 30, 31
Trumpler, Paul Robert, 610n
Trumpler's design criteria, 610–611
Truss head screw, 410
Tubular lap joint, 483
Tungsten, 48
Turner, M. J., 936n
Turn-of-the-nut method, 422, 447
Twin loads, simple supports, 997
Two-bearing mountings, 589
Two-piece bushings, 638
Two-plane bending, 88
Two-stage compound gear train, 679, 680
- U**
U-groove weld, 460
Uicker, John J., Jr., 735n
Ullman, David G., 7n
Ulrich, Karl T., 15n
Ultimate strength, 29n
UN series threads, 397
UNC threads, 399
Uncertainty, 16–17
Undamaged material, 316
Undercutting, 665
UNF threads, 399
Unidirectional continuous fiber composite, 56
Unified numbering system for metals and alloys (UNS), 40–41
Unified thread series, 396–399
- Uniform distribution, 969–970
Uniform load
 cantilever, 994
 fixed supports, 1000
 one fixed and one simple support, 999
 simple supports, 996
Uniformly distributed stresses, 84–85
Unilateral tolerance, 19
Unmodified phenolic adhesive, 482
UNR series threads, 397
UNS, 40–41
Unstable crack growth, 232
Unstable lubrication, 603
Upper deviation, 383
Urethane, 869
Urethane adhesive, 482
U.S. customary foot-pound-second system (fps), 21
- V**
V belts, 860, 862, 878–886
 analysis, 885
 angle of contact correction factor, 882
 belt length, 879
 durability (life) correlations, 883, 884
 efficiency, 863
 horsepower ratings, 881
 inside circumferences, 879
 lettered sections, 878, 879
 service factors, 882
 tensions, 883
Valve spring, 508
Van Gerpen, H. W., 760n
Vanadium, 48
Variable load. *See* Fatigue failure-variable loading
Variable-cross-section punch-press frame, 166–167
Variable-speed belt drives, 862
Variance, 960
Variate, 962
Velocity factor, 718
Vertical shear stress, 94
Vertical worm-gear speed reducer, 350
Vibration analysis, 951–952
Virgin material, 316
Virtual number of teeth, 671, 673
Viscosity, 599–601
Viscosity charts, 612–615
Volkersen, O., 483
Volkersen shear-lag model, 483, 486, 487
Volute spring, 540, 541
von Mises, R., 214
von Mises stress, 214, 943
von Mises-Hencky theory, 215

W

- Wahl, A. M., 504n, 534
- Wahl factor, 501
- Waisman, J. L., 287
- Wake, W. C., 483, 489
- Wallin, A. W., 863n
- Walton, Charles F., 37n, 229
- Washer-faced regular nut, 410
- Washers, 1036, 1037
- Wear, 723
- Wear factor, 320
- Weibull distribution, 555–556, 970–972
- Weibullian statistics, 550
- Weld bonding, 487
- Welding and bonding—permanent joints, 457–497
 - adhesive bonding, 480–489
 - butt and fillet welds, 460–463. *See also* Fillet welds
 - fatigue loading, 478–480
 - resistance welding, 480
 - static loading, 474–477
 - strength of welded joints, 471–473
 - stress in welded joints in bending, 469–471
 - stress in welded joints in torsion, 464–468
 - welding symbols, 458–460
- Welding symbols, 458–460
- White cast iron, 50
- Whole depth, 656
- Width of space, 655, 656
- Width series, 560
- Wileman, J., 415n, 416
- Wire and sheet-metal gauges, 1031–1032
- Wire diameter, 500
- Wire rope, 896–904
 - bearing pressure, 899–900
 - factors of safety, 898–899
 - failure, 897
 - fatigue diagram, 899–900
 - materials, 897
 - nine-hoist problem, 901–902
 - properties, 901
 - service-life curve, 901
 - static load, 898
 - strength loss, 898
 - types, 896
- Wire springs, 500
- Wirsching, P. H., 284n
- Wolford, J. C., 517n
- Woodruff key, 380, 381
- Worm face width, 792
- Worm gears, 655, 675–676, 789–801.
 - See also* Gears
 - AGMA strength/durability equations, 789–792
 - Buckingham wear load, 800–801
 - designing the mesh, 797–800
 - force analysis, 694–697
 - gear teeth, 798
 - mechanical efficiency, 793
 - single-enveloping/double-enveloping sets, 655, 675
 - tooth system, 678
- Worm outside diameter, 791
- Worm root diameter, 791
- Worm-gear face width, 792
- Worm-gear root diameter, 792
- Worm-gear throat diameter, 791
- Woven fabric composite, 56
- Woven-asbestos lining, 843
- Woven-cotton lining, 843
- Wrought alloys, 51

Y

- Yellow brass, 53
- Yield (Langer) line, 297–300
- Yield point, 29
- Yield strength, 29
- Young, W. C., 97n
- Young, Warren C., 147n
- Young's modulus, 29, 56, 59–62, 83, 387, 415, 876

Z

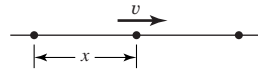
- Zerol bevel gear, 766
- Zienkiewicz, O. C., 953n
- Zimmerli, F. P., 518n

Chapter 1

Problems 1-1 through 1-4 are for student research.

1-5

(a) Point vehicles



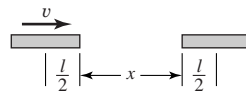
$$Q = \frac{\text{cars}}{\text{hour}} = \frac{v}{x} = \frac{42.1v - v^2}{0.324}$$

Seek stationary point maximum

$$\frac{dQ}{dv} = 0 = \frac{42.1 - 2v}{0.324} \therefore v^* = 21.05 \text{ mph}$$

$$Q^* = \frac{42.1(21.05) - 21.05^2}{0.324} = 1368 \text{ cars/h } \textit{Ans.}$$

(b)



$$Q = \frac{v}{x + l} = \left(\frac{0.324}{v(42.1) - v^2} + \frac{l}{v} \right)^{-1}$$

Maximize Q with $l = 10/5280$ mi

v	Q
22.18	1221.431
22.19	1221.433
22.20	1221.435 ←
22.21	1221.435
22.22	1221.434

$$\% \text{ loss of throughput} = \frac{1368 - 1221}{1221} = 12\% \textit{ Ans.}$$

(c) % increase in speed $\frac{22.2 - 21.05}{21.05} = 5.5\%$

Modest change in optimal speed *Ans.*

1-6 This and the following problem may be the student's first experience with a figure of merit.

- Formulate fom to reflect larger figure of merit for larger merit.
- Use a maximization optimization algorithm. When one gets into computer implementation and answers are not known, minimizing instead of maximizing is the largest error one can make.

$$\sum F_V = F_1 \sin \theta - W = 0$$

$$\sum F_H = -F_1 \cos \theta - F_2 = 0$$

From which

$$F_1 = W/\sin \theta$$

$$F_2 = -W \cos \theta/\sin \theta$$

$$\text{fom} = -\$ = -\phi\gamma \text{ (volume)}$$

$$\doteq -\phi\gamma(l_1 A_1 + l_2 A_2)$$

$$A_1 = \frac{F_1}{S} = \frac{W}{S \sin \theta}, \quad l_2 = \frac{l_1}{\cos \theta}$$

$$A_2 = \left| \frac{F_2}{S} \right| = \frac{W \cos \theta}{S \sin \theta}$$

$$\begin{aligned} \text{fom} &= -\phi\gamma \left(\frac{l_2}{\cos \theta} \frac{W}{S \sin \theta} + \frac{l_2 W \cos \theta}{S \sin \theta} \right) \\ &= \frac{-\phi\gamma W l_2}{S} \left(\frac{1 + \cos^2 \theta}{\cos \theta \sin \theta} \right) \end{aligned}$$

Set leading constant to unity

θ°	fom
0	$-\infty$
20	-5.86
30	-4.04
40	-3.22
45	-3.00
50	-2.87
54.736	-2.828
60	-2.886

$$\theta^* = 54.736^\circ \quad \text{Ans.}$$

$$\text{fom}^* = -2.828$$

Alternative:

$$\frac{d}{d\theta} \left(\frac{1 + \cos^2 \theta}{\cos \theta \sin \theta} \right) = 0$$

And solve resulting transcendental for θ^* .

Check second derivative to see if a maximum, minimum, or point of inflection has been found. Or, evaluate fom on either side of θ^* .

1-7

- (a) $x_1 + x_2 = X_1 + e_1 + X_2 + e_2$
 error = $e = (x_1 + x_2) - (X_1 + X_2)$
 $= e_1 + e_2$ *Ans.*
- (b) $x_1 - x_2 = X_1 + e_1 - (X_2 + e_2)$
 $e = (x_1 - x_2) - (X_1 - X_2) = e_1 - e_2$ *Ans.*
- (c) $x_1 x_2 = (X_1 + e_1)(X_2 + e_2)$
 $e = x_1 x_2 - X_1 X_2 = X_1 e_2 + X_2 e_1 + e_1 e_2$
 $\doteq X_1 e_2 + X_2 e_1 = X_1 X_2 \left(\frac{e_1}{X_1} + \frac{e_2}{X_2} \right)$ *Ans.*
- (d) $\frac{x_1}{x_2} = \frac{X_1 + e_1}{X_2 + e_2} = \frac{X_1}{X_2} \left(\frac{1 + e_1/X_1}{1 + e_2/X_2} \right)$
 $\left(1 + \frac{e_2}{X_2} \right)^{-1} \doteq 1 - \frac{e_2}{X_2}$ and $\left(1 + \frac{e_1}{X_1} \right) \left(1 - \frac{e_2}{X_2} \right) \doteq 1 + \frac{e_1}{X_1} - \frac{e_2}{X_2}$
 $e = \frac{x_1}{x_2} - \frac{X_1}{X_2} \doteq \frac{X_1}{X_2} \left(\frac{e_1}{X_1} - \frac{e_2}{X_2} \right)$ *Ans.*

1-8

- (a) $x_1 = \sqrt{5} = 2.236\ 067\ 977\ 5$
 $X_1 = 2.23$ 3-correct digits
 $x_2 = \sqrt{6} = 2.449\ 487\ 742\ 78$
 $X_2 = 2.44$ 3-correct digits
 $x_1 + x_2 = \sqrt{5} + \sqrt{6} = 4.685\ 557\ 720\ 28$
 $e_1 = x_1 - X_1 = \sqrt{5} - 2.23 = 0.006\ 067\ 977\ 5$
 $e_2 = x_2 - X_2 = \sqrt{6} - 2.44 = 0.009\ 489\ 742\ 78$
 $e = e_1 + e_2 = \sqrt{5} - 2.23 + \sqrt{6} - 2.44 = 0.015\ 557\ 720\ 28$
 Sum = $x_1 + x_2 = X_1 + X_2 + e$
 $= 2.23 + 2.44 + 0.015\ 557\ 720\ 28$
 $= 4.685\ 557\ 720\ 28$ (Checks) *Ans.*
- (b) $X_1 = 2.24$, $X_2 = 2.45$
 $e_1 = \sqrt{5} - 2.24 = -0.003\ 932\ 022\ 50$
 $e_2 = \sqrt{6} - 2.45 = -0.000\ 510\ 257\ 22$
 $e = e_1 + e_2 = -0.004\ 442\ 279\ 72$
 Sum = $X_1 + X_2 + e$
 $= 2.24 + 2.45 + (-0.004\ 442\ 279\ 72)$
 $= 4.685\ 557\ 720\ 28$ *Ans.*

1-9

- (a) $\sigma = 20(6.89) = 137.8 \text{ MPa}$
 (b) $F = 350(4.45) = 1558 \text{ N} = 1.558 \text{ kN}$
 (c) $M = 1200 \text{ lbf} \cdot \text{in} (0.113) = 135.6 \text{ N} \cdot \text{m}$
 (d) $A = 2.4(645) = 1548 \text{ mm}^2$
 (e) $I = 17.4 \text{ in}^4 (2.54)^4 = 724.2 \text{ cm}^4$
 (f) $A = 3.6(1.610)^2 = 9.332 \text{ km}^2$
 (g) $E = 21(1000)(6.89) = 144.69(10^3) \text{ MPa} = 144.7 \text{ GPa}$
 (h) $v = 45 \text{ mi/h} (1.61) = 72.45 \text{ km/h}$
 (i) $V = 60 \text{ in}^3 (2.54)^3 = 983.2 \text{ cm}^3 = 0.983 \text{ liter}$

1-10

- (a) $l = 1.5/0.305 = 4.918 \text{ ft} = 59.02 \text{ in}$
 (b) $\sigma = 600/6.89 = 86.96 \text{ kpsi}$
 (c) $p = 160/6.89 = 23.22 \text{ psi}$
 (d) $Z = 1.84(10^5)/(25.4)^3 = 11.23 \text{ in}^3$
 (e) $w = 38.1/175 = 0.218 \text{ lbf/in}$
 (f) $\delta = 0.05/25.4 = 0.00197 \text{ in}$
 (g) $v = 6.12/0.0051 = 1200 \text{ ft/min}$
 (h) $\epsilon = 0.0021 \text{ in/in}$
 (i) $V = 30/(0.254)^3 = 1831 \text{ in}^3$

1-11

- (a) $\sigma = \frac{200}{15.3} = 13.1 \text{ MPa}$
 (b) $\sigma = \frac{42(10^3)}{6(10^{-2})^2} = 70(10^6) \text{ N/m}^2 = 70 \text{ MPa}$
 (c) $y = \frac{1200(800)^3(10^{-3})^3}{3(207)10^9(64)10^3(10^{-3})^4} = 1.546(10^{-2}) \text{ m} = 15.5 \text{ mm}$
 (d) $\theta = \frac{1100(250)(10^{-3})}{79.3(10^9)(\pi/32)(25)^4(10^{-3})^4} = 9.043(10^{-2}) \text{ rad} = 5.18^\circ$

1-12

- (a) $\sigma = \frac{600}{20(6)} = 5 \text{ MPa}$
 (b) $I = \frac{1}{12}8(24)^3 = 9216 \text{ mm}^4$
 (c) $I = \frac{\pi}{64}32^4(10^{-1})^4 = 5.147 \text{ cm}^4$
 (d) $\tau = \frac{16(16)}{\pi(25^3)(10^{-3})^3} = 5.215(10^6) \text{ N/m}^2 = 5.215 \text{ MPa}$

1-13

$$(a) \tau = \frac{120(10^3)}{(\pi/4)(20^2)} = 382 \text{ MPa}$$

$$(b) \sigma = \frac{32(800)(800)(10^{-3})}{\pi(32)^3(10^{-3})^3} = 198.9(10^6) \text{ N/m}^2 = 198.9 \text{ MPa}$$

$$(c) Z = \frac{\pi}{32(36)}(36^4 - 26^4) = 3334 \text{ mm}^3$$

$$(d) k = \frac{(1.6)^4 (10^{-3})^4 (79.3)(10^9)}{8(19.2)^3 (10^{-3})^3 (32)} = 286.8 \text{ N/m}$$

Chapter 2

2-1 From Table A-20

$$S_{ut} = 470 \text{ MPa (68 kpsi)}, \quad S_y = 390 \text{ MPa (57 kpsi)} \quad \text{Ans.}$$

2-2 From Table A-20

$$S_{ut} = 620 \text{ MPa (90 kpsi)}, \quad S_y = 340 \text{ MPa (49.5 kpsi)} \quad \text{Ans.}$$

2-3 Comparison of yield strengths:

$$S_{ut} \text{ of G10500 HR is } \frac{620}{470} = 1.32 \text{ times larger than SAE1020 CD} \quad \text{Ans.}$$

$$S_{yt} \text{ of SAE1020 CD is } \frac{390}{340} = 1.15 \text{ times larger than G10500 HR} \quad \text{Ans.}$$

From Table A-20, the ductilities (reduction in areas) show,

$$\text{SAE1020 CD is } \frac{40}{35} = 1.14 \text{ times larger than G10500} \quad \text{Ans.}$$

The stiffness values of these materials are identical *Ans.*

	S_{ut} MPa (kpsi)	S_y MPa (kpsi)	Table A-20 Ductility R%	Table A-5 Stiffness GPa (Mpsi)
SAE1020 CD	470(68)	390 (57)	40	207(30)
UNS10500 HR	620(90)	340(49.5)	35	207(30)

2-4 From Table A-21

$$1040 \text{ Q\&T} \quad \bar{S}_y = 593 (86) \text{ MPa (kpsi)} \quad \text{at } 205^\circ\text{C (400}^\circ\text{F)} \quad \text{Ans.}$$

2-5 From Table A-21

$$1040 \text{ Q\&T} \quad R = 65\% \quad \text{at } 650^\circ\text{C (1200}^\circ\text{F)} \quad \text{Ans.}$$

2-6 Using Table A-5, the specific strengths are:

$$\text{UNS G10350 HR steel: } \frac{S_y}{W} = \frac{39.5(10^3)}{0.282} = 1.40(10^5) \text{ in} \quad \text{Ans.}$$

$$2024 \text{ T4 aluminum: } \frac{S_y}{W} = \frac{43(10^3)}{0.098} = 4.39(10^5) \text{ in} \quad \text{Ans.}$$

$$\text{Ti-6Al-4V titanium: } \frac{S_y}{W} = \frac{140(10^3)}{0.16} = 8.75(10^5) \text{ in} \quad \text{Ans.}$$

ASTM 30 gray cast iron has no yield strength. *Ans.*

2-7 The specific moduli are:

$$\text{UNS G10350 HR steel: } \frac{E}{W} = \frac{30(10^6)}{0.282} = 1.06(10^8) \text{ in } \textit{Ans.}$$

$$\text{2024 T4 aluminum: } \frac{E}{W} = \frac{10.3(10^6)}{0.098} = 1.05(10^8) \text{ in } \textit{Ans.}$$

$$\text{Ti-6Al-4V titanium: } \frac{E}{W} = \frac{16.5(10^6)}{0.16} = 1.03(10^8) \text{ in } \textit{Ans.}$$

$$\text{Gray cast iron: } \frac{E}{W} = \frac{14.5(10^6)}{0.26} = 5.58(10^7) \text{ in } \textit{Ans.}$$

2-8

$$2G(1 + \nu) = E \Rightarrow \nu = \frac{E - 2G}{2G}$$

From Table A-5

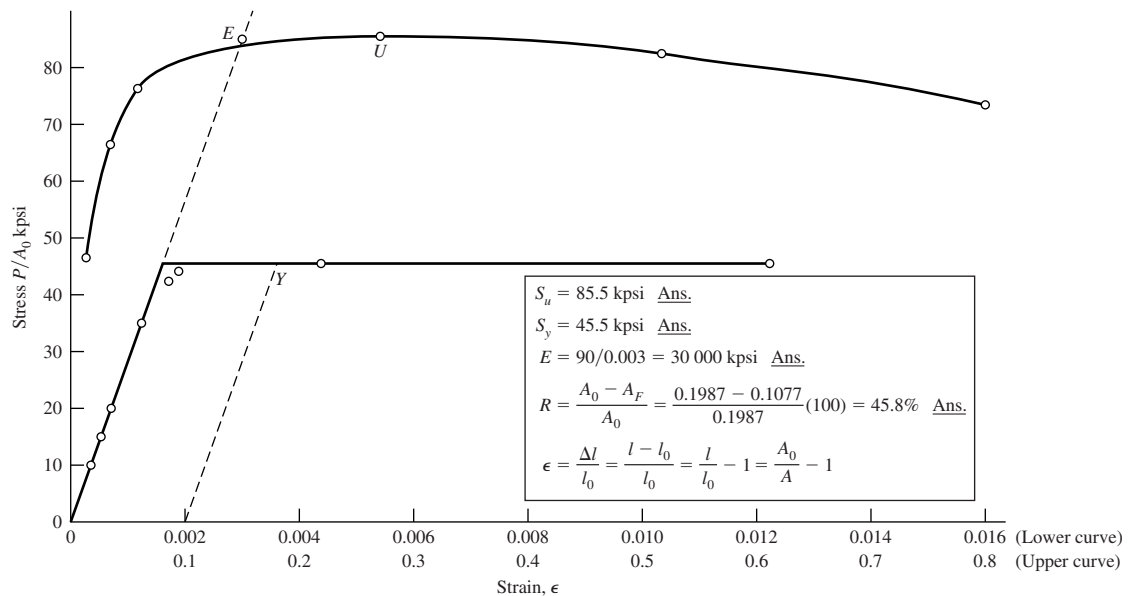
$$\text{Steel: } \nu = \frac{30 - 2(11.5)}{2(11.5)} = 0.304 \textit{ Ans.}$$

$$\text{Aluminum: } \nu = \frac{10.4 - 2(3.90)}{2(3.90)} = 0.333 \textit{ Ans.}$$

$$\text{Beryllium copper: } \nu = \frac{18 - 2(7)}{2(7)} = 0.286 \textit{ Ans.}$$

$$\text{Gray cast iron: } \nu = \frac{14.5 - 2(6)}{2(6)} = 0.208 \textit{ Ans.}$$

2-9



2-10 To plot σ_{true} vs. ε , the following equations are applied to the data.

$$A_0 = \frac{\pi(0.503)^2}{4} = 0.1987 \text{ in}^2$$

$$\text{Eq. (2-4)} \quad \varepsilon = \ln \frac{l}{l_0} \quad \text{for } 0 \leq \Delta L \leq 0.0028 \text{ in}$$

$$\varepsilon = \ln \frac{A_0}{A} \quad \text{for } \Delta L > 0.0028 \text{ in}$$

$$\sigma_{\text{true}} = \frac{P}{A}$$

The results are summarized in the table below and plotted on the next page.
The last 5 points of data are used to plot $\log \sigma$ vs $\log \varepsilon$

The curve fit gives $m = 0.2306$ *Ans.*
 $\log \sigma_0 = 5.1852 \Rightarrow \sigma_0 = 153.2 \text{ kpsi}$

For 20% cold work, Eq. (2-10) and Eq. (2-13) give,

$$A = A_0(1 - W) = 0.1987(1 - 0.2) = 0.1590 \text{ in}^2$$

$$\varepsilon = \ln \frac{A_0}{A} = \ln \frac{0.1987}{0.1590} = 0.2231$$

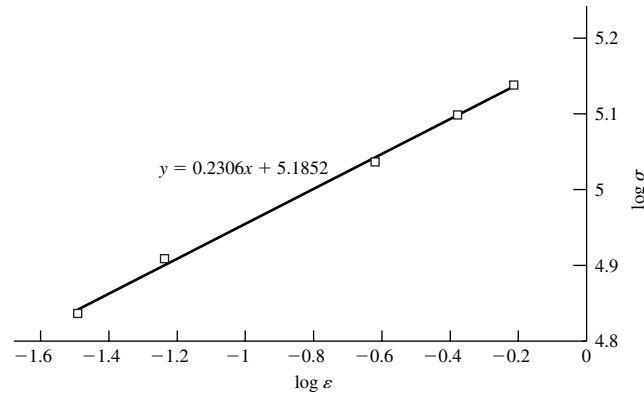
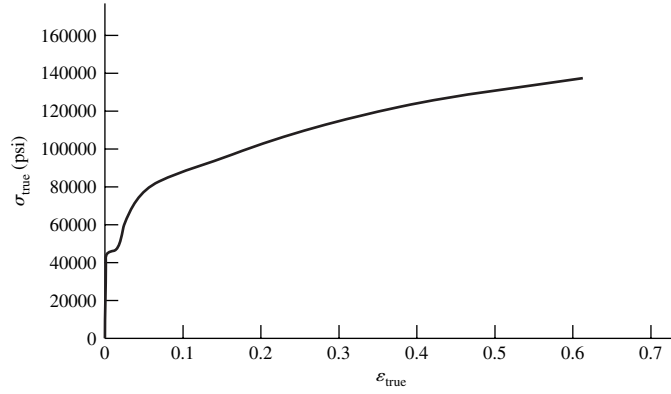
Eq. (2-14):

$$S'_y = \sigma_0 \varepsilon^m = 153.2(0.2231)^{0.2306} = 108.4 \text{ kpsi} \quad \text{Ans.}$$

Eq. (2-15), with $S_u = 85.5 \text{ kpsi}$ from Prob. 2-9,

$$S'_u = \frac{S_u}{1 - W} = \frac{85.5}{1 - 0.2} = 106.9 \text{ kpsi} \quad \text{Ans.}$$

P	ΔL	A	ε	σ_{true}	$\log \varepsilon$	$\log \sigma_{\text{true}}$
0	0	0.198713	0	0		
1000	0.0004	0.198713	0.0002	5032.388	-3.69901	3.701774
2000	0.0006	0.198713	0.0003	10064.78	-3.52294	4.002804
3000	0.0010	0.198713	0.0005	15097.17	-3.30114	4.178895
4000	0.0013	0.198713	0.00065	20129.55	-3.18723	4.303834
7000	0.0023	0.198713	0.001149	35226.72	-2.93955	4.546872
8400	0.0028	0.198713	0.001399	42272.06	-2.85418	4.626053
8800	0.0036	0.1984	0.001575	44354.84	-2.80261	4.646941
9200	0.0089	0.1978	0.004604	46511.63	-2.33685	4.667562
9100		0.1963	0.012216	46357.62	-1.91305	4.666121
13200		0.1924	0.032284	68607.07	-1.49101	4.836369
15200		0.1875	0.058082	81066.67	-1.23596	4.908842
17000		0.1563	0.240083	108765.2	-0.61964	5.03649
16400		0.1307	0.418956	125478.2	-0.37783	5.098568
14800		0.1077	0.612511	137418.8	-0.21289	5.138046



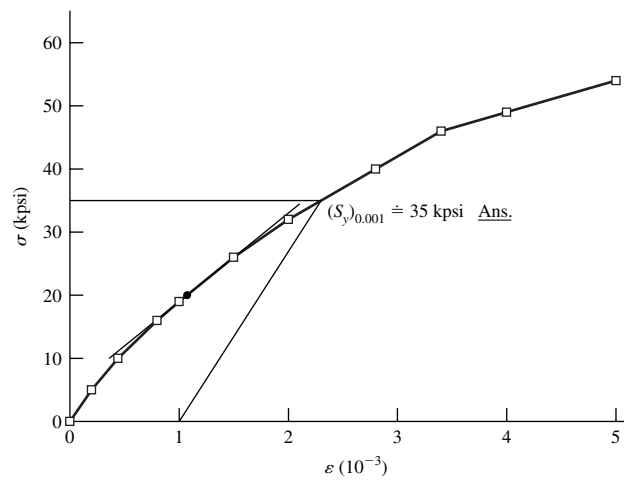
2-11 Tangent modulus at $\sigma = 0$ is

$$E_0 = \frac{\Delta\sigma}{\Delta\varepsilon} \doteq \frac{5000 - 0}{0.2(10^{-3}) - 0} = 25(10^6) \text{ psi}$$

At $\sigma = 20$ kpsi

$$E_{20} \doteq \frac{(26 - 19)(10^3)}{(1.5 - 1)(10^{-3})} = 14.0(10^6) \text{ psi} \quad \text{Ans.}$$

$\varepsilon(10^{-3})$	σ (kpsi)
0	0
0.20	5
0.44	10
0.80	16
1.0	19
1.5	26
2.0	32
2.8	40
3.4	46
4.0	49
5.0	54



2-12 Since $|\varepsilon_o| = |\varepsilon_i|$

$$\left| \ln \frac{R+h}{R+N} \right| = \left| \ln \frac{R}{R+N} \right| = \left| -\ln \frac{R+N}{R} \right|$$

$$\frac{R+h}{R+N} = \frac{R+N}{R}$$

$$(R+N)^2 = R(R+h)$$

From which,

$$N^2 + 2RN - Rh = 0$$

The roots are:

$$N = R \left[-1 \pm \left(1 + \frac{h}{R} \right)^{1/2} \right]$$

The + sign being significant,

$$N = R \left[\left(1 + \frac{h}{R} \right)^{1/2} - 1 \right] \quad \text{Ans.}$$

Substitute for N in

$$\varepsilon_o = \ln \frac{R+h}{R+N}$$

Gives
$$\varepsilon_o = \ln \left[\frac{R+h}{R + R \left(1 + \frac{h}{R} \right)^{1/2} - R} \right] = \ln \left(1 + \frac{h}{R} \right)^{1/2} \quad \text{Ans.}$$

These constitute a useful pair of equations in cold-forming situations, allowing the surface strains to be found so that cold-working strength enhancement can be estimated.

2-13 From Table A-22

AISI 1212

$$S_y = 28.0 \text{ kpsi}, \quad \sigma_f = 106 \text{ kpsi}, \quad S_{ut} = 61.5 \text{ kpsi}$$

$$\sigma_0 = 110 \text{ kpsi}, \quad m = 0.24, \quad \varepsilon_f = 0.85$$

From Eq. (2-12)

$$\varepsilon_u = m = 0.24$$

Eq. (2-10)
$$\frac{A_0}{A_i'} = \frac{1}{1-W} = \frac{1}{1-0.2} = 1.25$$

Eq. (2-13)
$$\varepsilon_i = \ln 1.25 = 0.2231 \Rightarrow \varepsilon_i < \varepsilon_u$$

Eq. (2-14)
$$S_y' = \sigma_0 \varepsilon_i^m = 110(0.2231)^{0.24} = 76.7 \text{ kpsi} \quad \text{Ans.}$$

Eq. (2-15)
$$S_u' = \frac{S_u}{1-W} = \frac{61.5}{1-0.2} = 76.9 \text{ kpsi} \quad \text{Ans.}$$

2-14 For $H_B = 250$,

Eq. (2-17)
$$\begin{aligned} S_u &= 0.495 (250) = 124 \text{ kpsi} \\ &= 3.41 (250) = 853 \text{ MPa} \end{aligned} \quad \text{Ans.}$$

2-15 For the data given,

$$\sum H_B = 2530 \quad \sum H_B^2 = 640\,226$$

$$\bar{H}_B = \frac{2530}{10} = 253 \quad \hat{\sigma}_{HB} = \sqrt{\frac{640\,226 - (2530)^2/10}{9}} = 3.887$$

Eq. (2-17)

$$\bar{S}_u = 0.495(253) = 125.2 \text{ kpsi} \quad \text{Ans.}$$

$$\bar{\sigma}_{su} = 0.495(3.887) = 1.92 \text{ kpsi} \quad \text{Ans.}$$

2-16 From Prob. 2-15, $\bar{H}_B = 253$ and $\hat{\sigma}_{HB} = 3.887$

Eq. (2-18)

$$\bar{S}_u = 0.23(253) - 12.5 = 45.7 \text{ kpsi} \quad \text{Ans.}$$

$$\hat{\sigma}_{su} = 0.23(3.887) = 0.894 \text{ kpsi} \quad \text{Ans.}$$

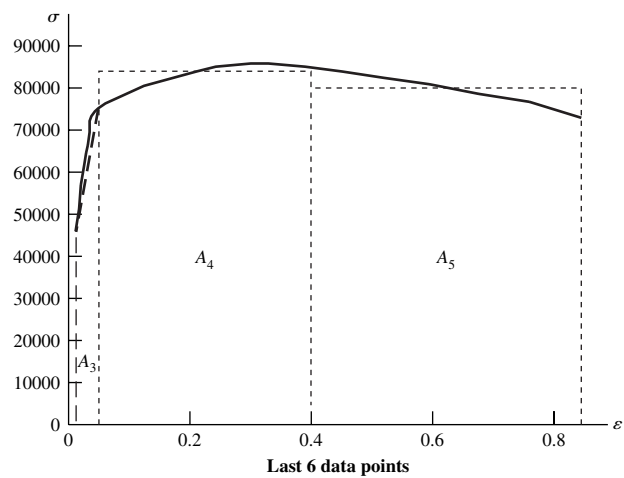
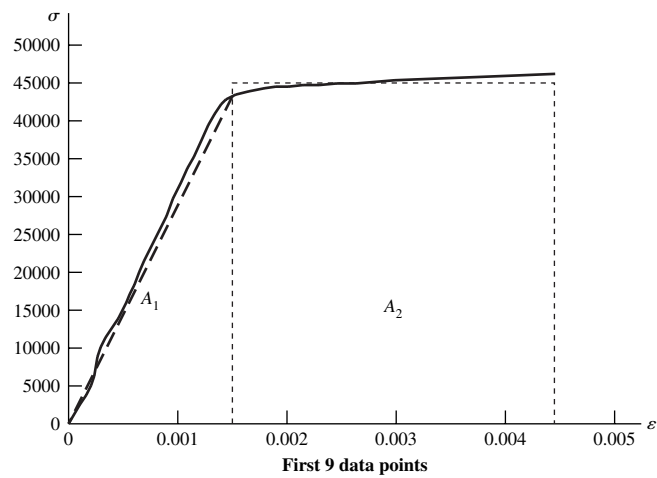
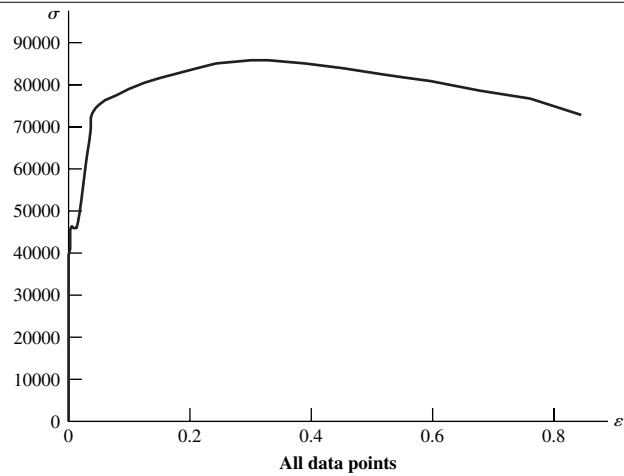
2-17

(a)

$$u_R \doteq \frac{45.5^2}{2(30)} = 34.5 \text{ in} \cdot \text{lbf/in}^3 \quad \text{Ans.}$$

(b)

P	ΔL	A	$A_0/A - 1$	ε	$\sigma = P/A_0$
0	0			0	0
1 000	0.0004			0.0002	5 032.39
2 000	0.0006			0.0003	10 064.78
3 000	0.0010			0.0005	15 097.17
4 000	0.0013			0.00065	20 129.55
7 000	0.0023			0.00115	35 226.72
8 400	0.0028			0.0014	42 272.06
8 800	0.0036			0.0018	44 285.02
9 200	0.0089			0.00445	46 297.97
9 100		0.1963	0.012 291	0.012 291	45 794.73
13 200		0.1924	0.032 811	0.032 811	66 427.53
15 200		0.1875	0.059 802	0.059 802	76 492.30
17 000		0.1563	0.271 355	0.271 355	85 550.60
16 400		0.1307	0.520 373	0.520 373	82 531.17
14 800		0.1077	0.845 059	0.845 059	74 479.35



$$\begin{aligned}
 u_T &\doteq \sum_{i=1}^5 A_i = \frac{1}{2}(43\,000)(0.0015) + 45\,000(0.00445 - 0.0015) \\
 &\quad + \frac{1}{2}(45\,000 + 76\,500)(0.0598 - 0.00445) \\
 &\quad + 81\,000(0.4 - 0.0598) + 80\,000(0.845 - 0.4) \\
 &\doteq 66.7(10^3)\text{in} \cdot \text{lbf/in}^3 \quad \text{Ans.}
 \end{aligned}$$

2-18 $m = Al\rho$

For stiffness, $k = AE/l$, or, $A = kl/E$.

Thus, $m = kl^2\rho/E$, and, $M = E/\rho$. Therefore, $\beta = 1$

From Fig. 2-16, ductile materials include Steel, Titanium, Molybdenum, Aluminum, and Composites.

For strength, $S = F/A$, or, $A = F/S$.

Thus, $m = Fl\rho/S$, and, $M = S/\rho$.

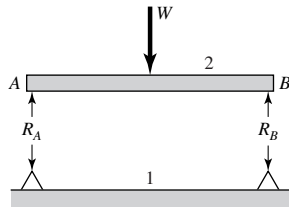
From Fig. 2-19, lines parallel to S/ρ give for ductile materials, Steel, Nickel, Titanium, and composites.

Common to both stiffness and strength are Steel, Titanium, Aluminum, and Composites. *Ans.*

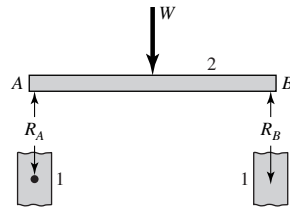


Chapter 3

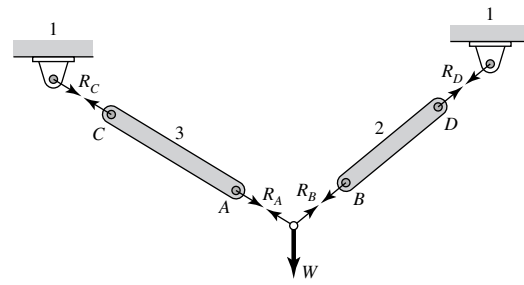
3-1



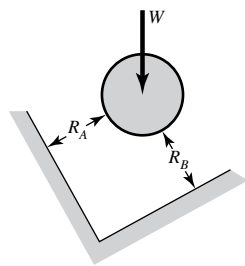
(a)



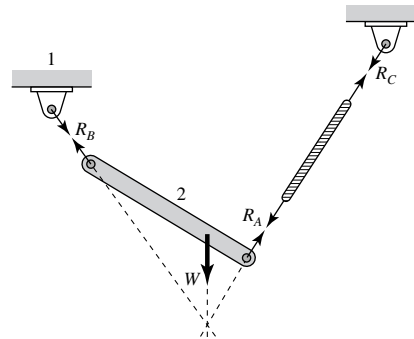
(b)



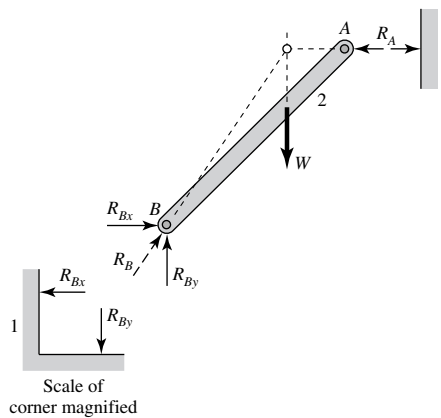
(c)



(d)



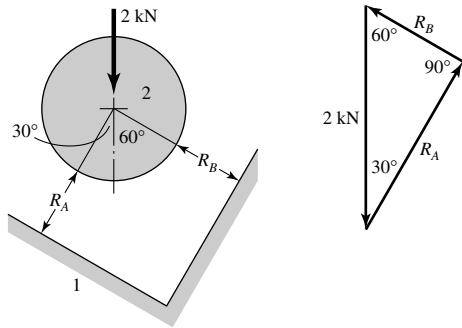
(e)



(f)

3-2

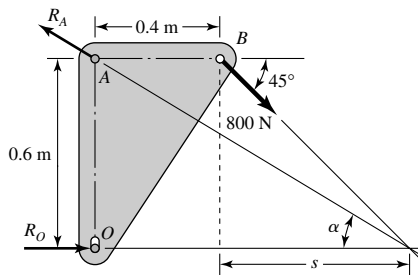
(a)



$$R_A = 2 \sin 60 = 1.732 \text{ kN} \quad \text{Ans.}$$

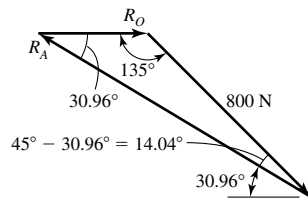
$$R_B = 2 \sin 30 = 1 \text{ kN} \quad \text{Ans.}$$

(b)



$$S = 0.6 \text{ m}$$

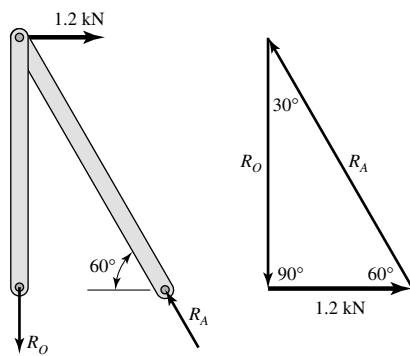
$$\alpha = \tan^{-1} \frac{0.6}{0.4 + 0.6} = 30.96^\circ$$



$$\frac{R_A}{\sin 135} = \frac{800}{\sin 30.96} \Rightarrow R_A = 1100 \text{ N} \quad \text{Ans.}$$

$$\frac{R_O}{\sin 14.04} = \frac{800}{\sin 30.96} \Rightarrow R_O = 377 \text{ N} \quad \text{Ans.}$$

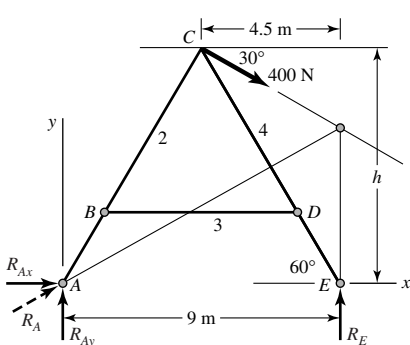
(c)



$$R_O = \frac{1.2}{\tan 30} = 2.078 \text{ kN} \quad \text{Ans.}$$

$$R_A = \frac{1.2}{\sin 30} = 2.4 \text{ kN} \quad \text{Ans.}$$

(d) Step 1: Find R_A and R_E



$$h = \frac{4.5}{\tan 30} = 7.794 \text{ m}$$

$$\curvearrowleft + \sum M_A = 0$$

$$9R_E - 7.794(400 \cos 30) - 4.5(400 \sin 30) = 0$$

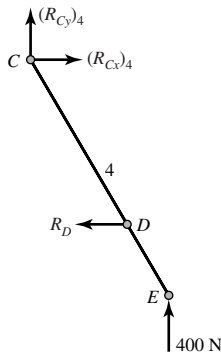
$$R_E = 400 \text{ N} \quad \text{Ans.}$$

$$\sum F_x = 0 \quad R_{Ax} + 400 \cos 30 = 0 \Rightarrow R_{Ax} = -346.4 \text{ N}$$

$$\sum F_y = 0 \quad R_{Ay} + 400 - 400 \sin 30 = 0 \Rightarrow R_{Ay} = -200 \text{ N}$$

$$R_A = \sqrt{346.4^2 + 200^2} = 400 \text{ N} \quad \text{Ans.}$$

Step 2: Find components of R_C on link 4 and R_D



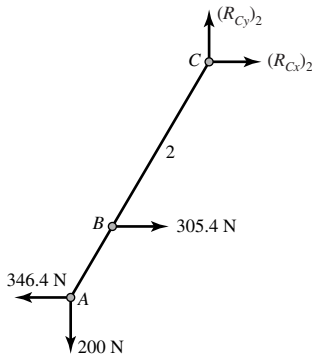
$$\zeta + \sum M_C = 0$$

$$400(4.5) - (7.794 - 1.9)R_D = 0 \Rightarrow R_D = 305.4 \text{ N} \quad \text{Ans.}$$

$$\sum F_x = 0 \Rightarrow (R_{Cx})_4 = 305.4 \text{ N}$$

$$\sum F_y = 0 \Rightarrow (R_{Cy})_4 = -400 \text{ N}$$

Step 3: Find components of R_C on link 2

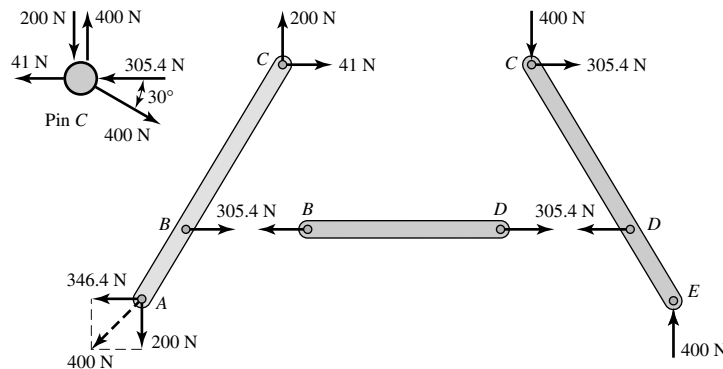


$$\sum F_x = 0$$

$$(R_{Cx})_2 + 305.4 - 346.4 = 0 \Rightarrow (R_{Cx})_2 = 41 \text{ N}$$

$$\sum F_y = 0$$

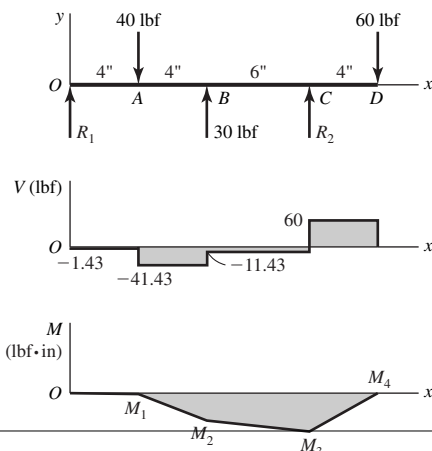
$$(R_{Cy})_2 = 200 \text{ N}$$



Ans.

3-3

(a)



$$\zeta + \sum M_0 = 0$$

$$-18(60) + 14R_2 + 8(30) - 4(40) = 0$$

$$R_2 = 71.43 \text{ lbf}$$

$$\sum F_y = 0: R_1 - 40 + 30 + 71.43 - 60 = 0$$

$$R_1 = -1.43 \text{ lbf}$$

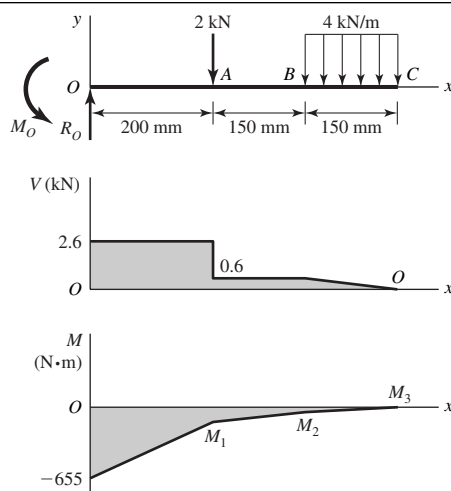
$$M_1 = -1.43(4) = -5.72 \text{ lbf} \cdot \text{in}$$

$$M_2 = -5.72 - 41.43(4) = -171.44 \text{ lbf} \cdot \text{in}$$

$$M_3 = -171.44 - 11.43(6) = -240 \text{ lbf} \cdot \text{in}$$

$$M_4 = -240 + 60(4) = 0 \quad \text{checks!}$$

(b)



$$\sum F_y = 0$$

$$R_0 = 2 + 4(0.150) = 2.6 \text{ kN}$$

$$\sum M_0 = 0$$

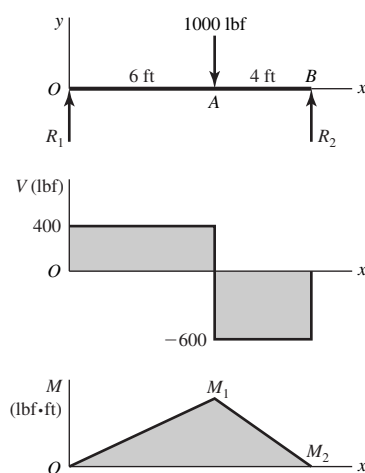
$$M_0 = 2000(0.2) + 4000(0.150)(0.425) = 655 \text{ N} \cdot \text{m}$$

$$M_1 = -655 + 2600(0.2) = -135 \text{ N} \cdot \text{m}$$

$$M_2 = -135 + 600(0.150) = -45 \text{ N} \cdot \text{m}$$

$$M_3 = -45 + \frac{1}{2}600(0.150) = 0 \text{ checks!}$$

(c)



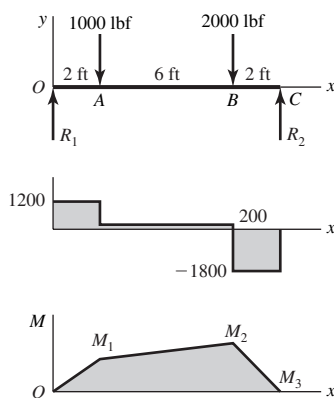
$$\sum M_0 = 0: 10R_2 - 6(1000) = 0 \Rightarrow R_2 = 600 \text{ lbf}$$

$$\sum F_y = 0: R_1 - 1000 + 600 = 0 \Rightarrow R_1 = 400 \text{ lbf}$$

$$M_1 = 400(6) = 2400 \text{ lbf} \cdot \text{ft}$$

$$M_2 = 2400 - 600(4) = 0 \text{ checks!}$$

(d)



$$\curvearrowleft + \sum M_C = 0$$

$$-10R_1 + 2(2000) + 8(1000) = 0$$

$$R_1 = 1200 \text{ lbf}$$

$$\sum F_y = 0: 1200 - 1000 - 2000 + R_2 = 0$$

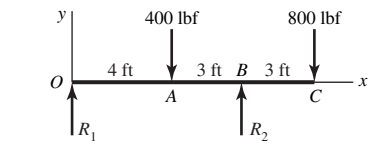
$$R_2 = 1800 \text{ lbf}$$

$$M_1 = 1200(2) = 2400 \text{ lbf} \cdot \text{ft}$$

$$M_2 = 2400 + 200(6) = 3600 \text{ lbf} \cdot \text{ft}$$

$$M_3 = 3600 - 1800(2) = 0 \text{ checks!}$$

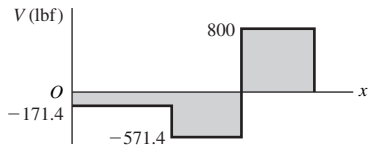
(e)



$$\curvearrowleft + \sum M_B = 0$$

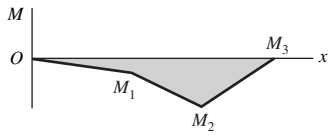
$$-7R_1 + 3(400) - 3(800) = 0$$

$$R_1 = -171.4 \text{ lbf}$$



$$\sum F_y = 0: -171.4 - 400 + R_2 - 800 = 0$$

$$R_2 = 1371.4 \text{ lbf}$$

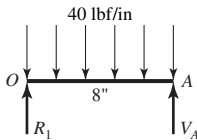


$$M_1 = -171.4(4) = -685.7 \text{ lbf} \cdot \text{ft}$$

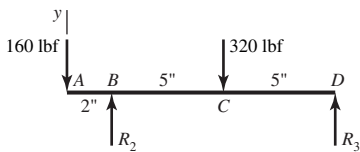
$$M_2 = -685.7 - 571.4(3) = -2400 \text{ lbf} \cdot \text{ft}$$

$$M_3 = -2400 + 800(3) = 0 \text{ checks!}$$

(f) Break at A



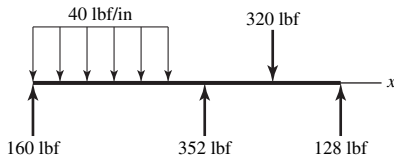
$$R_1 = V_A = \frac{1}{2}40(8) = 160 \text{ lbf}$$



$$\curvearrowleft + \sum M_D = 0$$

$$12(160) - 10R_2 + 320(5) = 0$$

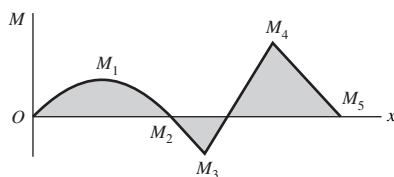
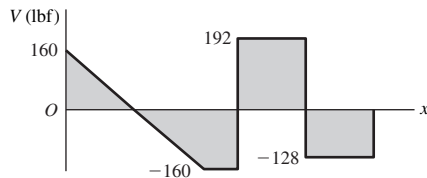
$$R_2 = 352 \text{ lbf}$$



$$\sum F_y = 0$$

$$-160 + 352 - 320 + R_3 = 0$$

$$R_3 = 128 \text{ lbf}$$



$$M_1 = \frac{1}{2}160(4) = 320 \text{ lbf} \cdot \text{in}$$

$$M_2 = 320 - \frac{1}{2}160(4) = 0 \text{ checks! (hinge)}$$

$$M_3 = 0 - 160(2) = -320 \text{ lbf} \cdot \text{in}$$

$$M_4 = -320 + 192(5) = 640 \text{ lbf} \cdot \text{in}$$

$$M_5 = 640 - 128(5) = 0 \text{ checks!}$$

3-4

$$(a) \quad q = R_1 \langle x \rangle^{-1} - 40 \langle x - 4 \rangle^{-1} + 30 \langle x - 8 \rangle^{-1} + R_2 \langle x - 14 \rangle^{-1} - 60 \langle x - 18 \rangle^{-1}$$

$$V = R_1 - 40 \langle x - 4 \rangle^0 + 30 \langle x - 8 \rangle^0 + R_2 \langle x - 14 \rangle^0 - 60 \langle x - 18 \rangle^0 \quad (1)$$

$$M = R_1 x - 40 \langle x - 4 \rangle^1 + 30 \langle x - 8 \rangle^1 + R_2 \langle x - 14 \rangle^1 - 60 \langle x - 18 \rangle^1 \quad (2)$$

for $x = 18^+$ $V = 0$ and $M = 0$ Eqs. (1) and (2) give

$$0 = R_1 - 40 + 30 + R_2 - 60 \Rightarrow R_1 + R_2 = 70 \quad (3)$$

$$0 = R_1(18) - 40(14) + 30(10) + 4R_2 \Rightarrow 9R_1 + 2R_2 = 130 \quad (4)$$

Solve (3) and (4) simultaneously to get $R_1 = -1.43$ lbf, $R_2 = 71.43$ lbf. *Ans.*

From Eqs. (1) and (2), at $x = 0^+$, $V = R_1 = -1.43$ lbf, $M = 0$

$$x = 4^+: \quad V = -1.43 - 40 = -41.43, \quad M = -1.43x$$

$$x = 8^+: \quad V = -1.43 - 40 + 30 = -11.43$$

$$M = -1.43(8) - 40(8 - 4)^1 = -171.44$$

$$x = 14^+: \quad V = -1.43 - 40 + 30 + 71.43 = 60$$

$$M = -1.43(14) - 40(14 - 4) + 30(14 - 8) = -240.$$

$$x = 18^+: \quad V = 0, \quad M = 0 \quad \text{See curves of } V \text{ and } M \text{ in Prob. 3-3 solution.}$$

$$(b) \quad q = R_0 \langle x \rangle^{-1} - M_0 \langle x \rangle^{-2} - 2000 \langle x - 0.2 \rangle^{-1} - 4000 \langle x - 0.35 \rangle^0 + 4000 \langle x - 0.5 \rangle^0$$

$$V = R_0 - M_0 \langle x \rangle^{-1} - 2000 \langle x - 0.2 \rangle^0 - 4000 \langle x - 0.35 \rangle^1 + 4000 \langle x - 0.5 \rangle^1 \quad (1)$$

$$M = R_0 x - M_0 - 2000 \langle x - 0.2 \rangle^1 - 2000 \langle x - 0.35 \rangle^2 + 2000 \langle x - 0.5 \rangle^2 \quad (2)$$

at $x = 0.5^+$ m, $V = M = 0$, Eqs. (1) and (2) give

$$R_0 - 2000 - 4000(0.5 - 0.35) = 0 \Rightarrow R_1 = 2600 \text{ N} = 2.6 \text{ kN} \quad \text{Ans.}$$

$$R_0(0.5) - M_0 - 2000(0.5 - 0.2) - 2000(0.5 - 0.35)^2 = 0$$

with $R_0 = 2600$ N, $M_0 = 655$ N · m *Ans.*

With R_0 and M_0 , Eqs. (1) and (2) give the same V and M curves as Prob. 3-3 (note for V , $M_0 \langle x \rangle^{-1}$ has no physical meaning).

$$(c) \quad q = R_1 \langle x \rangle^{-1} - 1000 \langle x - 6 \rangle^{-1} + R_2 \langle x - 10 \rangle^{-1}$$

$$V = R_1 - 1000 \langle x - 6 \rangle^0 + R_2 \langle x - 10 \rangle^0 \quad (1)$$

$$M = R_1 x - 1000 \langle x - 6 \rangle^1 + R_2 \langle x - 10 \rangle^1 \quad (2)$$

at $x = 10^+$ ft, $V = M = 0$, Eqs. (1) and (2) give

$$R_1 - 1000 + R_2 = 0 \Rightarrow R_1 + R_2 = 1000$$

$$10R_1 - 1000(10 - 6) = 0 \Rightarrow R_1 = 400 \text{ lbf}, \quad R_2 = 1000 - 400 = 600 \text{ lbf}$$

$$0 \leq x \leq 6: \quad V = 400 \text{ lbf}, \quad M = 400x$$

$$6 \leq x \leq 10: \quad V = 400 - 1000(x - 6)^0 = 600 \text{ lbf}$$

$$M = 400x - 1000(x - 6) = 6000 - 600x$$

See curves of Prob. 3-3 solution.

$$(d) \quad q = R_1 \langle x \rangle^{-1} - 1000 \langle x - 2 \rangle^{-1} - 2000 \langle x - 8 \rangle^{-1} + R_2 \langle x - 10 \rangle^{-1}$$

$$V = R_1 - 1000 \langle x - 2 \rangle^0 - 2000 \langle x - 8 \rangle^0 + R_2 \langle x - 10 \rangle^0 \quad (1)$$

$$M = R_1 x - 1000 \langle x - 2 \rangle^1 - 2000 \langle x - 8 \rangle^1 + R_2 \langle x - 10 \rangle^1 \quad (2)$$

At $x = 10^+$, $V = M = 0$ from Eqs. (1) and (2)

$$R_1 - 1000 - 2000 + R_2 = 0 \Rightarrow R_1 + R_2 = 3000$$

$$10R_1 - 1000(10 - 2) - 2000(10 - 8) = 0 \Rightarrow R_1 = 1200 \text{ lbf},$$

$$R_2 = 3000 - 1200 = 1800 \text{ lbf}$$

$$0 \leq x \leq 2: \quad V = 1200 \text{ lbf}, \quad M = 1200x \text{ lbf} \cdot \text{ft}$$

$$2 \leq x \leq 8: \quad V = 1200 - 1000 = 200 \text{ lbf}$$

$$M = 1200x - 1000(x - 2) = 200x + 2000 \text{ lbf} \cdot \text{ft}$$

$$8 \leq x \leq 10: \quad V = 1200 - 1000 - 2000 = -1800 \text{ lbf}$$

$$M = 1200x - 1000(x - 2) - 2000(x - 8) = -1800x + 18000 \text{ lbf} \cdot \text{ft}$$

Plots are the same as in Prob. 3-3.

$$(e) \quad q = R_1 \langle x \rangle^{-1} - 400 \langle x - 4 \rangle^{-1} + R_2 \langle x - 7 \rangle^{-1} - 800 \langle x - 10 \rangle^{-1}$$

$$V = R_1 - 400 \langle x - 4 \rangle^0 + R_2 \langle x - 7 \rangle^0 - 800 \langle x - 10 \rangle^0 \quad (1)$$

$$M = R_1 x - 400 \langle x - 4 \rangle^1 + R_2 \langle x - 7 \rangle^1 - 800 \langle x - 10 \rangle^1 \quad (2)$$

at $x = 10^+$, $V = M = 0$

$$R_1 - 400 + R_2 - 800 = 0 \Rightarrow R_1 + R_2 = 1200 \quad (3)$$

$$10R_1 - 400(6) + R_2(3) = 0 \Rightarrow 10R_1 + 3R_2 = 2400 \quad (4)$$

Solve Eqs. (3) and (4) simultaneously: $R_1 = -171.4 \text{ lbf}$, $R_2 = 1371.4 \text{ lbf}$

$$0 \leq x \leq 4: \quad V = -171.4 \text{ lbf}, \quad M = -171.4x \text{ lbf} \cdot \text{ft}$$

$$4 \leq x \leq 7: \quad V = -171.4 - 400 = -571.4 \text{ lbf}$$

$$M = -171.4x - 400(x - 4) \text{ lbf} \cdot \text{ft} = -571.4x + 1600$$

$$7 \leq x \leq 10: \quad V = -171.4 - 400 + 1371.4 = 800 \text{ lbf}$$

$$M = -171.4x - 400(x - 4) + 1371.4(x - 7) = 800x - 8000 \text{ lbf} \cdot \text{ft}$$

Plots are the same as in Prob. 3-3.

$$(f) \quad q = R_1 \langle x \rangle^{-1} - 40 \langle x \rangle^0 + 40 \langle x - 8 \rangle^0 + R_2 \langle x - 10 \rangle^{-1} - 320 \langle x - 15 \rangle^{-1} + R_3 \langle x - 20 \rangle^{-1}$$

$$V = R_1 - 40x + 40 \langle x - 8 \rangle^1 + R_2 \langle x - 10 \rangle^0 - 320 \langle x - 15 \rangle^0 + R_3 \langle x - 20 \rangle^0 \quad (1)$$

$$M = R_1 x - 20x^2 + 20 \langle x - 8 \rangle^2 + R_2 \langle x - 10 \rangle^1 - 320 \langle x - 15 \rangle^1 + R_3 \langle x - 20 \rangle^1 \quad (2)$$

$$M = 0 \text{ at } x = 8 \text{ in } \therefore 8R_1 - 20(8)^2 = 0 \Rightarrow R_1 = 160 \text{ lbf}$$

at $x = 20^+$, V and $M = 0$

$$160 - 40(20) + 40(12) + R_2 - 320 + R_3 = 0 \Rightarrow R_2 + R_3 = 480$$

$$160(20) - 20(20)^2 + 20(12)^2 + 10R_2 - 320(5) = 0 \Rightarrow R_2 = 352 \text{ lbf}$$

$$R_3 = 480 - 352 = 128 \text{ lbf}$$

$$0 \leq x \leq 8: \quad V = 160 - 40x \text{ lbf}, \quad M = 160x - 20x^2 \text{ lbf} \cdot \text{in}$$

$$8 \leq x \leq 10: \quad V = 160 - 40x + 40(x - 8) = -160 \text{ lbf},$$

$$M = 160x - 20x^2 + 20(x - 8)^2 = 1280 - 160x \text{ lbf} \cdot \text{in}$$

$$10 \leq x \leq 15: \quad V = 160 - 40x + 40(x - 8) + 352 = 192 \text{ lbf}$$

$$M = 160x - 20x^2 + 20(x - 8) + 352(x - 10) = 192x - 2240$$

$$15 \leq x \leq 20: \quad V = 160 - 40x + 40(x - 8) + 352 - 320 = -128 \text{ lbf}$$

$$M = 160x - 20x^2 - 20(x - 8) + 352(x - 10) - 320(x - 15)$$

$$= -128x + 2560$$

Plots of V and M are the same as in Prob. 3-3.

3-5 Solution depends upon the beam selected.

3-6

(a) Moment at center, $x_c = (l - 2a)/2$

$$M_c = \frac{w}{2} \left[\frac{l}{2}(l - 2a) - \left(\frac{l}{2}\right)^2 \right] = \frac{wl}{2} \left(\frac{l}{4} - a \right)$$

At reaction, $|M_r| = wa^2/2$

$a = 2.25$, $l = 10$ in, $w = 100$ lbf/in

$$M_c = \frac{100(10)}{2} \left(\frac{10}{4} - 2.25 \right) = 125 \text{ lbf} \cdot \text{in}$$

$$M_r = \frac{100(2.25^2)}{2} = 253.1 \text{ lbf} \cdot \text{in} \quad \text{Ans.}$$

(b) Minimum occurs when $M_c = |M_r|$

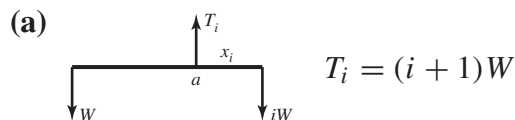
$$\frac{wl}{2} \left(\frac{l}{4} - a \right) = \frac{wa^2}{2} \Rightarrow a^2 + al - 0.25l^2 = 0$$

Taking the positive root

$$a = \frac{1}{2} \left[-l + \sqrt{l^2 + 4(0.25l^2)} \right] = \frac{l}{2} (\sqrt{2} - 1) = 0.2071l \quad \text{Ans.}$$

for $l = 10$ in and $w = 100$ lbf, $M_{\min} = (100/2)[(0.2071)(10)]^2 = 214 \text{ lbf} \cdot \text{in}$

3-7 For the i th wire from bottom, from summing forces vertically



From summing moments about point a,

$$\sum M_a = W(l - x_i) - iWx_i = 0$$

Giving,

$$x_i = \frac{l}{i + 1}$$

So

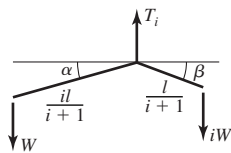
$$W = \frac{l}{1+1} = \frac{l}{2}$$

$$x = \frac{l}{2+1} = \frac{l}{3}$$

$$y = \frac{l}{3+1} = \frac{l}{4}$$

$$z = \frac{l}{4+1} = \frac{l}{5}$$

- (b) With straight rigid wires, the mobile is not stable. Any perturbation can lead to all wires becoming collinear. Consider a wire of length l bent at its string support:



$$\sum M_a = 0$$

$$\sum M_a = \frac{iWl}{i+1} \cos \alpha - \frac{iWl}{i+1} \cos \beta = 0$$

$$\frac{iWl}{i+1} (\cos \alpha - \cos \beta) = 0$$

Moment vanishes when $\alpha = \beta$ for any wire. Consider a ccw rotation angle β , which makes $\alpha \rightarrow \alpha + \beta$ and $\beta \rightarrow \alpha - \beta$

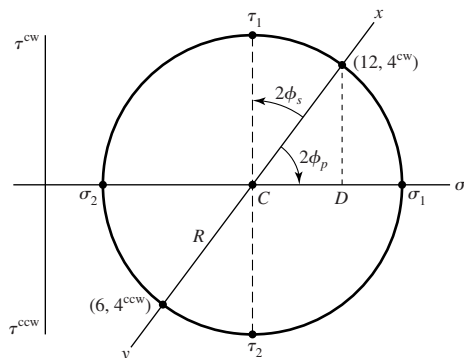
$$M_a = \frac{iWl}{i+1} [\cos(\alpha + \beta) - \cos(\alpha - \beta)]$$

$$= \frac{2iWl}{i+1} \sin \alpha \sin \beta \doteq \frac{2iWl\beta}{i+1} \sin \alpha$$

There exists a correcting moment of opposite sense to arbitrary rotation β . An equation for an upward bend can be found by changing the sign of W . The moment will no longer be correcting. A curved, convex-upward bend of wire will produce stable equilibrium too, but the equation would change somewhat.

3-8

(a)



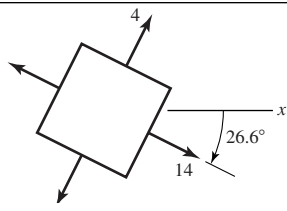
$$C = \frac{12+6}{2} = 9$$

$$CD = \frac{12-6}{2} = 3$$

$$R = \sqrt{3^2 + 4^2} = 5$$

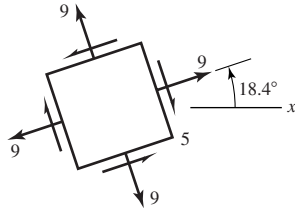
$$\sigma_1 = 9 + 5 = 14$$

$$\sigma_2 = 9 - 5 = 4$$

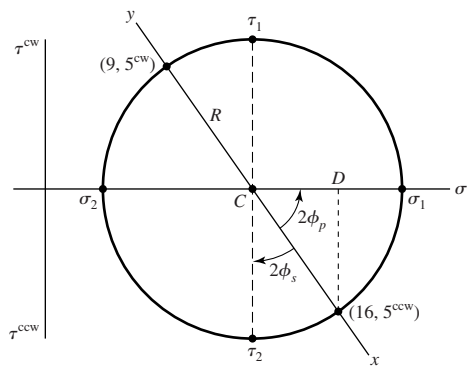


$$\phi_p = \frac{1}{2} \tan^{-1} \left(\frac{4}{3} \right) = 26.6^\circ \text{ cw}$$

$$\tau_1 = R = 5, \quad \phi_s = 45^\circ - 26.6^\circ = 18.4^\circ \text{ ccw}$$



(b)



$$C = \frac{9 + 16}{2} = 12.5$$

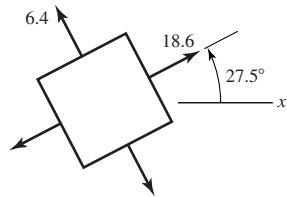
$$CD = \frac{16 - 9}{2} = 3.5$$

$$R = \sqrt{5^2 + 3.5^2} = 6.10$$

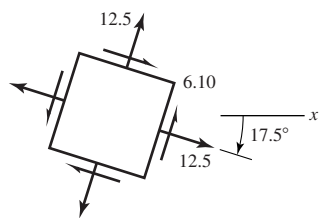
$$\sigma_1 = 6.1 + 12.5 = 18.6$$

$$\phi_p = \frac{1}{2} \tan^{-1} \frac{5}{3.5} = 27.5^\circ \text{ ccw}$$

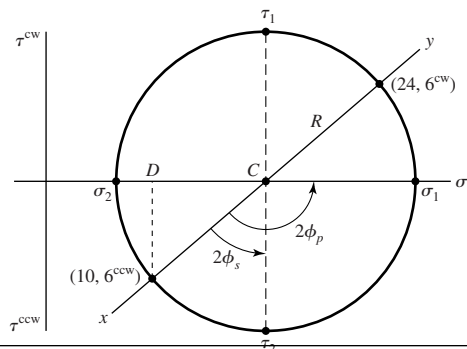
$$\sigma_2 = 12.5 - 6.1 = 6.4$$



$$\tau_1 = R = 6.10, \quad \phi_s = 45^\circ - 27.5^\circ = 17.5^\circ \text{ cw}$$



(c)



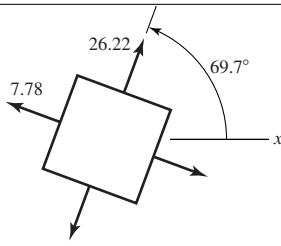
$$C = \frac{24 + 10}{2} = 17$$

$$CD = \frac{24 - 10}{2} = 7$$

$$R = \sqrt{7^2 + 6^2} = 9.22$$

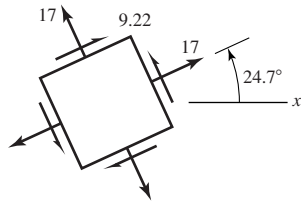
$$\sigma_1 = 17 + 9.22 = 26.22$$

$$\sigma_2 = 17 - 9.22 = 7.78$$

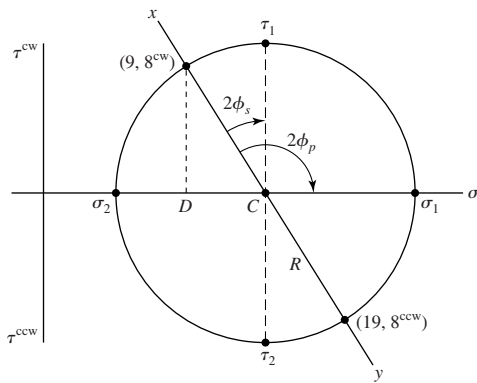


$$\phi_p = \frac{1}{2} \left[90 + \tan^{-1} \frac{7}{6} \right] = 69.7^\circ \text{ ccw}$$

$$\tau_1 = R = 9.22, \quad \phi_s = 69.7^\circ - 45^\circ = 24.7^\circ \text{ ccw}$$



(d)



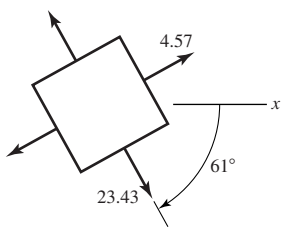
$$C = \frac{9 + 19}{2} = 14$$

$$CD = \frac{19 - 9}{2} = 5$$

$$R = \sqrt{5^2 + 8^2} = 9.434$$

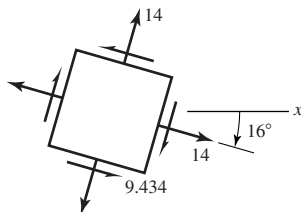
$$\sigma_1 = 14 + 9.43 = 23.43$$

$$\sigma_2 = 14 - 9.43 = 4.57$$



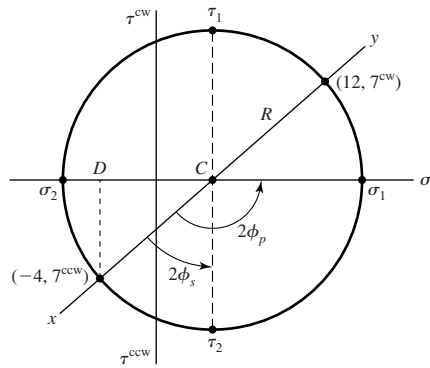
$$\phi_p = \frac{1}{2} \left[90 + \tan^{-1} \frac{5}{8} \right] = 61.0^\circ \text{ cw}$$

$$\tau_1 = R = 9.434, \quad \phi_s = 61^\circ - 45^\circ = 16^\circ \text{ cw}$$



3-9

(a)



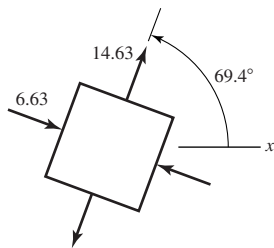
$$C = \frac{12 - 4}{2} = 4$$

$$CD = \frac{12 + 4}{2} = 8$$

$$R = \sqrt{8^2 + 7^2} = 10.63$$

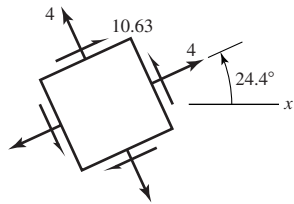
$$\sigma_1 = 4 + 10.63 = 14.63$$

$$\sigma_2 = 4 - 10.63 = -6.63$$

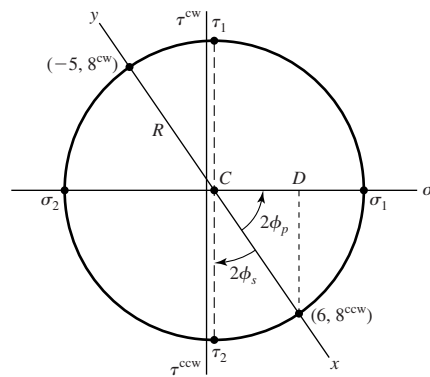


$$\phi_p = \frac{1}{2} \left[90 + \tan^{-1} \frac{8}{7} \right] = 69.4^\circ \text{ ccw}$$

$$\tau_1 = R = 10.63, \quad \phi_s = 69.4^\circ - 45^\circ = 24.4^\circ \text{ ccw}$$



(b)



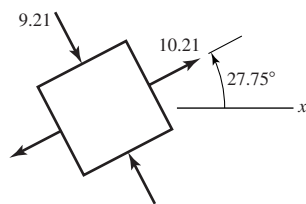
$$C = \frac{6 - 5}{2} = 0.5$$

$$CD = \frac{6 + 5}{2} = 5.5$$

$$R = \sqrt{5.5^2 + 8^2} = 9.71$$

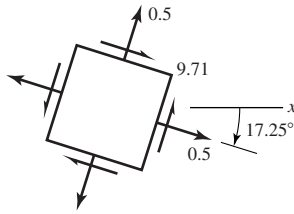
$$\sigma_1 = 0.5 + 9.71 = 10.21$$

$$\sigma_2 = 0.5 - 9.71 = -9.21$$

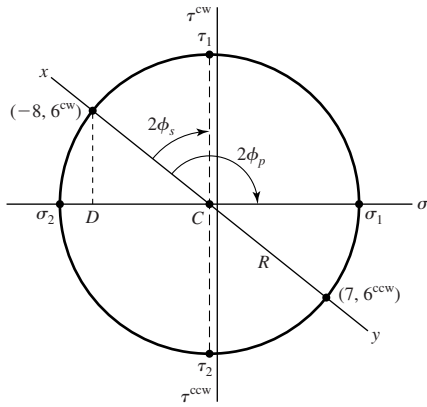


$$\phi_p = \frac{1}{2} \tan^{-1} \frac{8}{5.5} = 27.75^\circ \text{ ccw}$$

$$\tau_1 = R = 9.71, \quad \phi_s = 45^\circ - 27.75^\circ = 17.25^\circ \text{ cw}$$



(c)



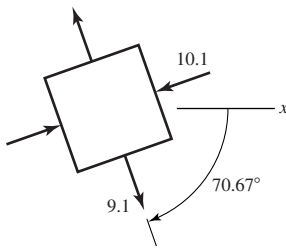
$$C = \frac{-8 + 7}{2} = -0.5$$

$$CD = \frac{8 + 7}{2} = 7.5$$

$$R = \sqrt{7.5^2 + 6^2} = 9.60$$

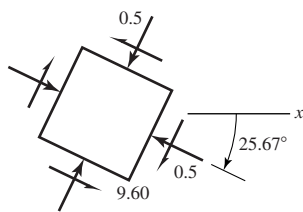
$$\sigma_1 = 9.60 - 0.5 = 9.10$$

$$\sigma_2 = -0.5 - 9.6 = -10.1$$

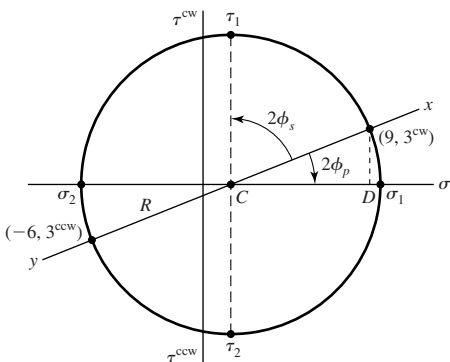


$$\phi_p = \frac{1}{2} \left[90 + \tan^{-1} \frac{7.5}{6} \right] = 70.67^\circ \text{ cw}$$

$$\tau_1 = R = 9.60, \quad \phi_s = 70.67^\circ - 45^\circ = 25.67^\circ \text{ cw}$$



(d)



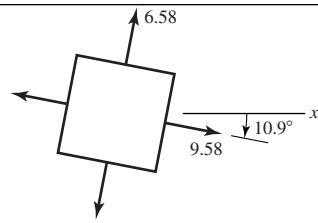
$$C = \frac{9 - 6}{2} = 1.5$$

$$CD = \frac{9 + 6}{2} = 7.5$$

$$R = \sqrt{7.5^2 + 3^2} = 8.078$$

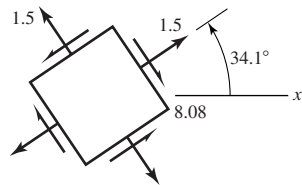
$$\sigma_1 = 1.5 + 8.078 = 9.58$$

$$\sigma_2 = 1.5 - 8.078 = -6.58$$



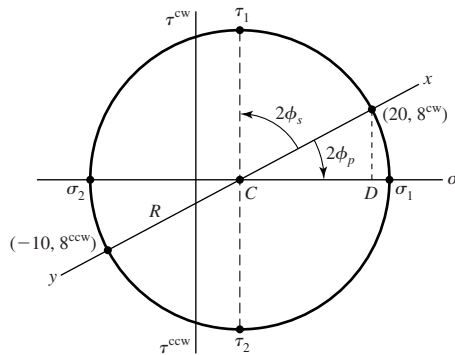
$$\phi_p = \frac{1}{2} \tan^{-1} \frac{3}{7.5} = 10.9^\circ \text{ cw}$$

$$\tau_1 = R = 8.078, \quad \phi_s = 45^\circ - 10.9^\circ = 34.1^\circ \text{ ccw}$$



3-10

(a)



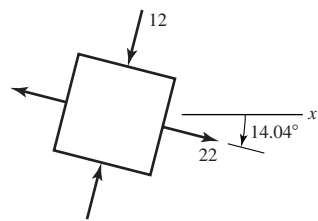
$$C = \frac{20 - 10}{2} = 5$$

$$CD = \frac{20 + 10}{2} = 15$$

$$R = \sqrt{15^2 + 8^2} = 17$$

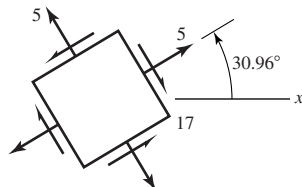
$$\sigma_1 = 5 + 17 = 22$$

$$\sigma_2 = 5 - 17 = -12$$

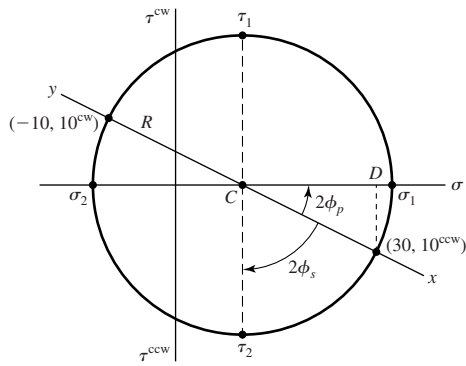


$$\phi_p = \frac{1}{2} \tan^{-1} \frac{8}{15} = 14.04^\circ \text{ cw}$$

$$\tau_1 = R = 17, \quad \phi_s = 45^\circ - 14.04^\circ = 30.96^\circ \text{ ccw}$$



(b)



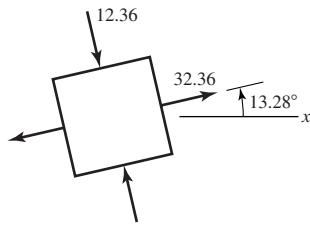
$$C = \frac{30 - 10}{2} = 10$$

$$CD = \frac{30 + 10}{2} = 20$$

$$R = \sqrt{20^2 + 10^2} = 22.36$$

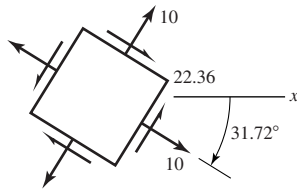
$$\sigma_1 = 10 + 22.36 = 32.36$$

$$\sigma_2 = 10 - 22.36 = -12.36$$

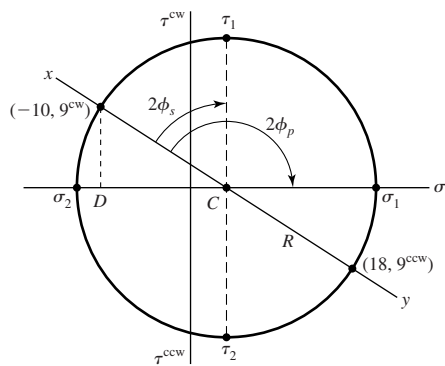


$$\phi_p = \frac{1}{2} \tan^{-1} \frac{10}{20} = 13.28^\circ \text{ ccw}$$

$$\tau_1 = R = 22.36, \quad \phi_s = 45^\circ - 13.28^\circ = 31.72^\circ \text{ cw}$$



(c)



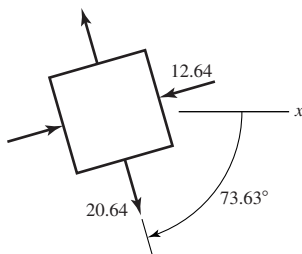
$$C = \frac{-10 + 18}{2} = 4$$

$$CD = \frac{10 + 18}{2} = 14$$

$$R = \sqrt{14^2 + 9^2} = 16.64$$

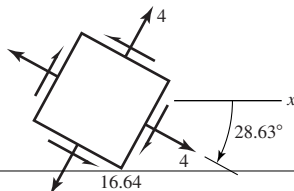
$$\sigma_1 = 4 + 16.64 = 20.64$$

$$\sigma_2 = 4 - 16.64 = -12.64$$

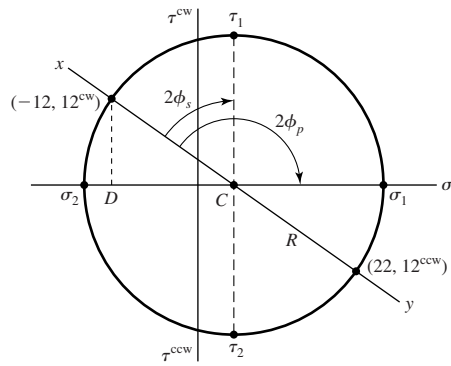


$$\phi_p = \frac{1}{2} \left[90 + \tan^{-1} \frac{14}{9} \right] = 73.63^\circ \text{ cw}$$

$$\tau_1 = R = 16.64, \quad \phi_s = 73.63^\circ - 45^\circ = 28.63^\circ \text{ cw}$$



(d)



$$C = \frac{-12 + 22}{2} = 5$$

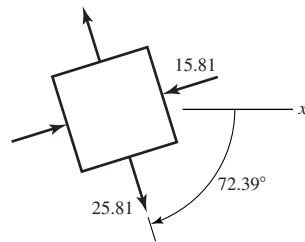
$$CD = \frac{12 + 22}{2} = 17$$

$$R = \sqrt{17^2 + 12^2} = 20.81$$

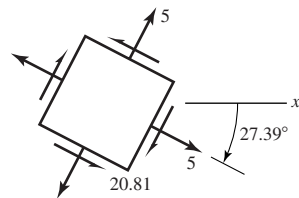
$$\sigma_1 = 5 + 20.81 = 25.81$$

$$\sigma_2 = 5 - 20.81 = -15.81$$

$$\phi_p = \frac{1}{2} \left[90 + \tan^{-1} \frac{17}{12} \right] = 72.39^\circ \text{ cw}$$

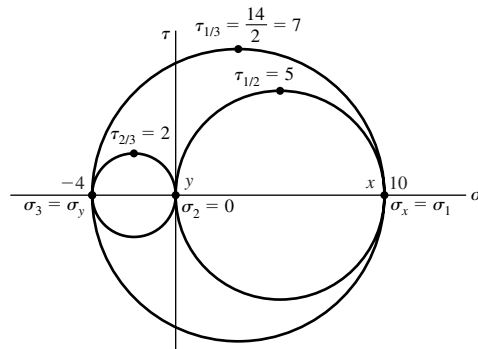


$$\tau_1 = R = 20.81, \quad \phi_s = 72.39^\circ - 45^\circ = 27.39^\circ \text{ cw}$$



3-11

(a)



$$C = \frac{0 + 10}{2} = 5$$

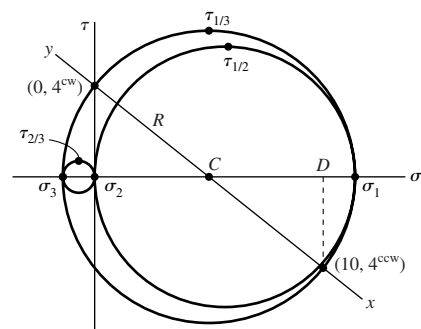
$$CD = \frac{10 - 0}{2} = 5$$

$$R = \sqrt{5^2 + 4^2} = 6.40$$

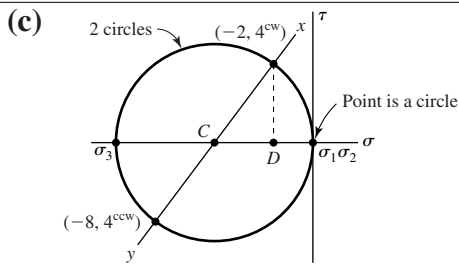
$$\sigma_1 = 5 + 6.40 = 11.40$$

$$\sigma_2 = 0, \quad \sigma_3 = 5 - 6.40 = -1.40$$

(b)



$$\tau_{1/3} = R = 6.40, \quad \tau_{1/2} = \frac{11.40}{2} = 5.70, \quad \tau_{2/3} = \frac{1.40}{2} = 0.70$$



$$C = \frac{-2 - 8}{2} = -5$$

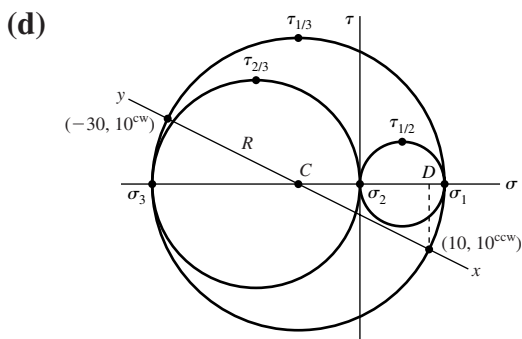
$$CD = \frac{8 - 2}{2} = 3$$

$$R = \sqrt{3^2 + 4^2} = 5$$

$$\sigma_1 = -5 + 5 = 0, \quad \sigma_2 = 0$$

$$\sigma_3 = -5 - 5 = -10$$

$$\tau_{1/3} = \frac{10}{2} = 5, \quad \tau_{1/2} = 0, \quad \tau_{2/3} = 5$$



$$C = \frac{10 - 30}{2} = -10$$

$$CD = \frac{10 + 30}{2} = 20$$

$$R = \sqrt{20^2 + 10^2} = 22.36$$

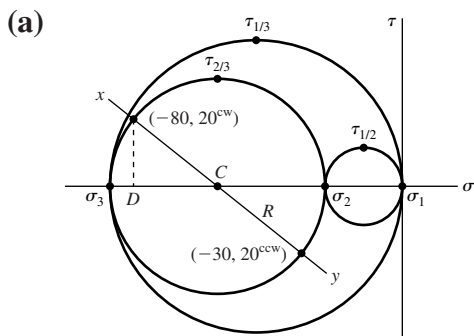
$$\sigma_1 = -10 + 22.36 = 12.36$$

$$\sigma_2 = 0$$

$$\sigma_3 = -10 - 22.36 = -32.36$$

$$\tau_{1/3} = 22.36, \quad \tau_{1/2} = \frac{12.36}{2} = 6.18, \quad \tau_{2/3} = \frac{32.36}{2} = 16.18$$

3-12



$$C = \frac{-80 - 30}{2} = -55$$

$$CD = \frac{80 - 30}{2} = 25$$

$$R = \sqrt{25^2 + 20^2} = 32.02$$

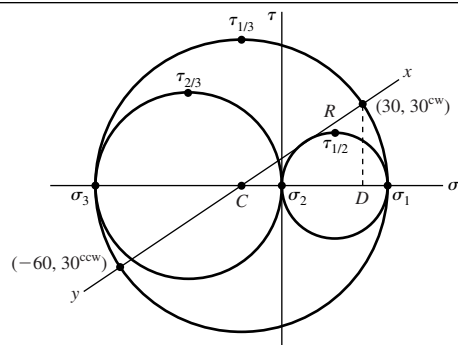
$$\sigma_1 = 0$$

$$\sigma_2 = -55 + 32.02 = -22.98 = -23.0$$

$$\sigma_3 = -55 - 32.0 = -87.0$$

$$\tau_{1/2} = \frac{23}{2} = 11.5, \quad \tau_{2/3} = 32.0, \quad \tau_{1/3} = \frac{87}{2} = 43.5$$

(b)



$$C = \frac{30 - 60}{2} = -15$$

$$CD = \frac{60 + 30}{2} = 45$$

$$R = \sqrt{45^2 + 30^2} = 54.1$$

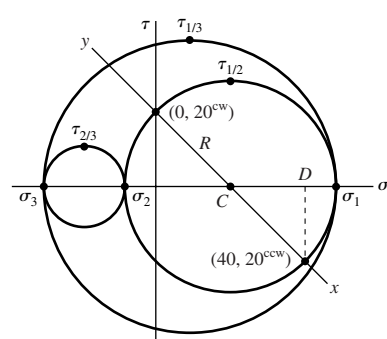
$$\sigma_1 = -15 + 54.1 = 39.1$$

$$\sigma_2 = 0$$

$$\sigma_3 = -15 - 54.1 = -69.1$$

$$\tau_{1/3} = \frac{39.1 + 69.1}{2} = 54.1, \quad \tau_{1/2} = \frac{39.1}{2} = 19.6, \quad \tau_{2/3} = \frac{69.1}{2} = 34.6$$

(c)



$$C = \frac{40 + 0}{2} = 20$$

$$CD = \frac{40 - 0}{2} = 20$$

$$R = \sqrt{20^2 + 20^2} = 28.3$$

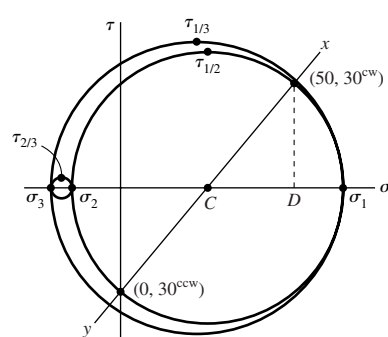
$$\sigma_1 = 20 + 28.3 = 48.3$$

$$\sigma_2 = 20 - 28.3 = -8.3$$

$$\sigma_3 = \sigma_z = -30$$

$$\tau_{1/3} = \frac{48.3 + 30}{2} = 39.1, \quad \tau_{1/2} = 28.3, \quad \tau_{2/3} = \frac{30 - 8.3}{2} = 10.9$$

(d)



$$C = \frac{50}{2} = 25$$

$$CD = \frac{50}{2} = 25$$

$$R = \sqrt{25^2 + 30^2} = 39.1$$

$$\sigma_1 = 25 + 39.1 = 64.1$$

$$\sigma_2 = 25 - 39.1 = -14.1$$

$$\sigma_3 = \sigma_z = -20$$

$$\tau_{1/3} = \frac{64.1 + 20}{2} = 42.1, \quad \tau_{1/2} = 39.1, \quad \tau_{2/3} = \frac{20 - 14.1}{2} = 2.95$$

3-13

$$\sigma = \frac{F}{A} = \frac{2000}{(\pi/4)(0.5^2)} = 10\,190 \text{ psi} = 10.19 \text{ kpsi} \quad \text{Ans.}$$

$$\delta = \frac{FL}{AE} = \sigma \frac{L}{E} = 10\,190 \frac{72}{30(10^6)} = 0.024\,46 \text{ in} \quad \text{Ans.}$$

$$\epsilon_1 = \frac{\delta}{L} = \frac{0.024\,46}{72} = 340(10^{-6}) = 340\mu \quad \text{Ans.}$$

From Table A-5, $\nu = 0.292$

$$\epsilon_2 = -\nu\epsilon_1 = -0.292(340) = -99.3\mu \quad \text{Ans.}$$

$$\Delta d = \epsilon_2 d = -99.3(10^{-6})(0.5) = -49.6(10^{-6}) \text{ in} \quad \text{Ans.}$$

3-14 From Table A-5, $E = 71.7 \text{ GPa}$

$$\delta = \sigma \frac{L}{E} = 135(10^6) \frac{3}{71.7(10^9)} = 5.65(10^{-3}) \text{ m} = 5.65 \text{ mm} \quad \text{Ans.}$$

3-15 With $\sigma_z = 0$, solve the first two equations of Eq. (3-19) simultaneously. Place E on the left-hand side of both equations, and using Cramer's rule,

$$\sigma_x = \frac{\begin{vmatrix} E\epsilon_x & -\nu \\ E\epsilon_y & 1 \end{vmatrix}}{\begin{vmatrix} 1 & -\nu \\ -\nu & 1 \end{vmatrix}} = \frac{E\epsilon_x + \nu E\epsilon_y}{1 - \nu^2} = \frac{E(\epsilon_x + \nu\epsilon_y)}{1 - \nu^2}$$

Likewise,

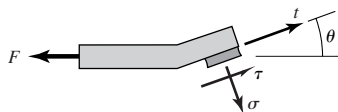
$$\sigma_y = \frac{E(\epsilon_y + \nu\epsilon_x)}{1 - \nu^2}$$

From Table A-5, $E = 207 \text{ GPa}$ and $\nu = 0.292$. Thus,

$$\sigma_x = \frac{E(\epsilon_x + \nu\epsilon_y)}{1 - \nu^2} = \frac{207(10^9)[0.0021 + 0.292(-0.000\,67)]}{1 - 0.292^2}(10^{-6}) = 431 \text{ MPa} \quad \text{Ans.}$$

$$\sigma_y = \frac{207(10^9)[-0.000\,67 + 0.292(0.0021)]}{1 - 0.292^2}(10^{-6}) = -12.9 \text{ MPa} \quad \text{Ans.}$$

3-16 The engineer has assumed the stress to be uniform. That is,



$$\sum F_t = -F \cos \theta + \tau A = 0 \Rightarrow \tau = \frac{F}{A} \cos \theta$$

When failure occurs in shear

$$S_{su} = \frac{F}{A} \cos \theta$$

The uniform stress assumption is common practice but is not exact. If interested in the details, see p. 570 of 6th edition.

3-17 From Eq. (3-15)

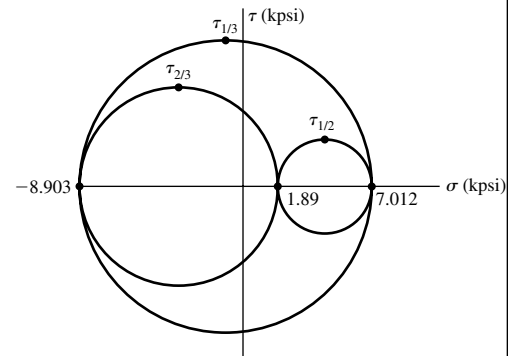
$$\begin{aligned} \sigma^3 - (-2 + 6 - 4)\sigma^2 + [-2(6) + (-2)(-4) + 6(-4) - 3^2 - 2^2 - (-5)^2]\sigma \\ - [-2(6)(-4) + 2(3)(2)(-5) - (-2)(2)^2 - 6(-5)^2 - (-4)(3)^2] = 0 \\ \sigma^3 - 66\sigma + 118 = 0 \end{aligned}$$

Roots are: 7.012, 1.89, -8.903 kpsi *Ans.*

$$\tau_{1/2} = \frac{7.012 - 1.89}{2} = 2.56 \text{ kpsi}$$

$$\tau_{2/3} = \frac{8.903 + 1.89}{2} = 5.40 \text{ kpsi}$$

$$\tau_{\max} = \tau_{1/3} = \frac{8.903 + 7.012}{2} = 7.96 \text{ kpsi} \quad \text{Ans.}$$



Note: For Probs. 3-17 to 3-19, one can also find the eigenvalues of the matrix

$$[\sigma] = \begin{bmatrix} \sigma_x & \tau_{xy} & \tau_{zx} \\ \tau_{xy} & \sigma_y & \tau_{yz} \\ \tau_{zx} & \tau_{yz} & \sigma_z \end{bmatrix}$$

for the principal stresses

3-18 From Eq. (3-15)

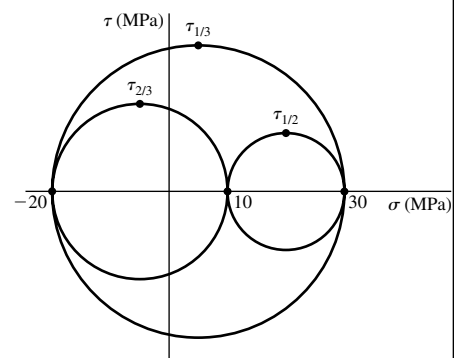
$$\begin{aligned} \sigma^3 - (10 + 0 + 10)\sigma^2 + [10(0) + 10(10) + 0(10) - 20^2 - (-10\sqrt{2})^2 - 0^2]\sigma \\ - [10(0)(10) + 2(20)(-10\sqrt{2})(0) - 10(-10\sqrt{2})^2 - 0(0)^2 - 10(20)^2] = 0 \\ \sigma^3 - 20\sigma^2 - 500\sigma + 6000 = 0 \end{aligned}$$

Roots are: 30, 10, -20 MPa *Ans.*

$$\tau_{1/2} = \frac{30 - 10}{2} = 10 \text{ MPa}$$

$$\tau_{2/3} = \frac{10 + 20}{2} = 15 \text{ MPa}$$

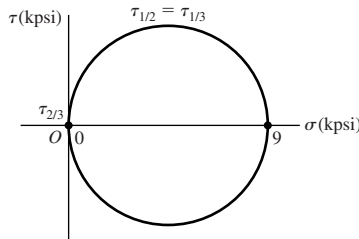
$$\tau_{\max} = \tau_{1/3} = \frac{30 + 20}{2} = 25 \text{ MPa} \quad \text{Ans.}$$



3-19 From Eq. (3-15)

$$\begin{aligned} \sigma^3 - (1 + 4 + 4)\sigma^2 + [1(4) + 1(4) + 4(4) - 2^2 - (-4)^2 - (-2)^2]\sigma \\ - [1(4)(4) + 2(2)(-4)(-2) - 1(-4)^2 - 4(-2)^2 - 4(2)^2] = 0 \\ \sigma^3 - 9\sigma^2 = 0 \end{aligned}$$

Roots are: 9, 0, 0 kpsi



$$\tau_{2/3} = 0, \quad \tau_{1/2} = \tau_{1/3} = \tau_{\max} = \frac{9}{2} = 4.5 \text{ kpsi} \quad \text{Ans.}$$

3-20

$$(a) R_1 = \frac{c}{l}F \quad M_{\max} = R_1a = \frac{ac}{l}F$$

$$\sigma = \frac{6M}{bh^2} = \frac{6}{bh^2} \frac{ac}{l}F \Rightarrow F = \frac{\sigma bh^2 l}{6ac} \quad \text{Ans.}$$

$$(b) \frac{F_m}{F} = \frac{(\sigma_m/\sigma)(b_m/b)(h_m/h)^2(l_m/l)}{(a_m/a)(c_m/c)} = \frac{1(s)(s)^2(s)}{(s)(s)} = s^2 \quad \text{Ans.}$$

For equal stress, the model load varies by the square of the scale factor.

3-21

$$R_1 = \frac{wl}{2}, \quad M_{\max}|_{x=l/2} = \frac{wl}{2} \left(l - \frac{l}{2} \right) = \frac{wl^2}{8}$$

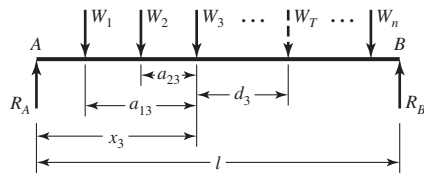
$$\sigma = \frac{6M}{bh^2} = \frac{6}{bh^2} \frac{wl^2}{8} = \frac{3Wl}{4bh^2} \Rightarrow W = \frac{4\sigma bh^2}{3l} \quad \text{Ans.}$$

$$\frac{W_m}{W} = \frac{(\sigma_m/\sigma)(b_m/b)(h_m/h)^2}{l_m/l} = \frac{1(s)(s)^2}{s} = s^2 \quad \text{Ans.}$$

$$\frac{w_m l_m}{wl} = s^2 \Rightarrow \frac{w_m}{w} = \frac{s^2}{s} = s \quad \text{Ans.}$$

For equal stress, the model load w varies linearly with the scale factor.

3-22

(a) Can solve by iteration *or* derive equations for the general case.Find maximum moment under wheel W_3

$$W_T = \sum W \text{ at centroid of } W\text{'s}$$

$$R_A = \frac{l - x_3 - d_3}{l} W_T$$

Under wheel 3

$$M_3 = R_A x_3 - W_1 a_{13} - W_2 a_{23} = \frac{(l - x_3 - d_3)}{l} W_T x_3 - W_1 a_{13} - W_2 a_{23}$$

$$\text{For maximum, } \frac{dM_3}{dx_3} = 0 = (l - d_3 - 2x_3) \frac{W_T}{l} \Rightarrow x_3 = \frac{l - d_3}{2}$$

$$\text{substitute into } M, \Rightarrow M_3 = \frac{(l - d_3)^2}{4l} W_T - W_1 a_{13} - W_2 a_{23}$$

This means the midpoint of d_3 intersects the midpoint of the beam

$$\text{For wheel } i \quad x_i = \frac{l - d_i}{2}, \quad M_i = \frac{(l - d_i)^2}{4l} W_T - \sum_{j=1}^{i-1} W_j a_{ji}$$

Note for wheel 1: $\sum W_j a_{ji} = 0$

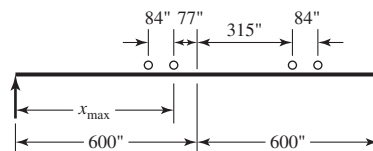
$$W_T = 104.4, \quad W_1 = W_2 = W_3 = W_4 = \frac{104.4}{4} = 26.1 \text{ kip}$$

$$\text{Wheel 1: } d_1 = \frac{476}{2} = 238 \text{ in, } M_1 = \frac{(1200 - 238)^2}{4(1200)} (104.4) = 20\,128 \text{ kip} \cdot \text{in}$$

$$\text{Wheel 2: } d_2 = 238 - 84 = 154 \text{ in}$$

$$M_2 = \frac{(1200 - 154)^2}{4(1200)} (104.4) - 26.1(84) = 21\,605 \text{ kip} \cdot \text{in} = M_{\max}$$

Check if all of the wheels are on the rail



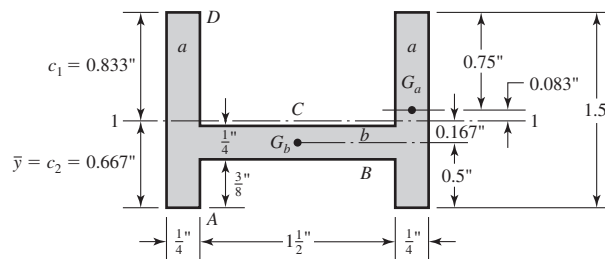
$$(b) \quad x_{\max} = 600 - 77 = 523 \text{ in}$$

(c) See above sketch.

(d) inner axles

3-23

(a)



$$A_a = A_b = 0.25(1.5) = 0.375 \text{ in}^2$$

$$A = 3(0.375) = 1.125 \text{ in}^2$$

$$\bar{y} = \frac{2(0.375)(0.75) + 0.375(0.5)}{1.125} = 0.667 \text{ in}$$

$$I_a = \frac{0.25(1.5)^3}{12} = 0.0703 \text{ in}^4$$

$$I_b = \frac{1.5(0.25)^3}{12} = 0.00195 \text{ in}^4$$

$$I_1 = 2[0.0703 + 0.375(0.083)^2] + [0.00195 + 0.375(0.167)^2] = 0.158 \text{ in}^4 \quad \text{Ans.}$$

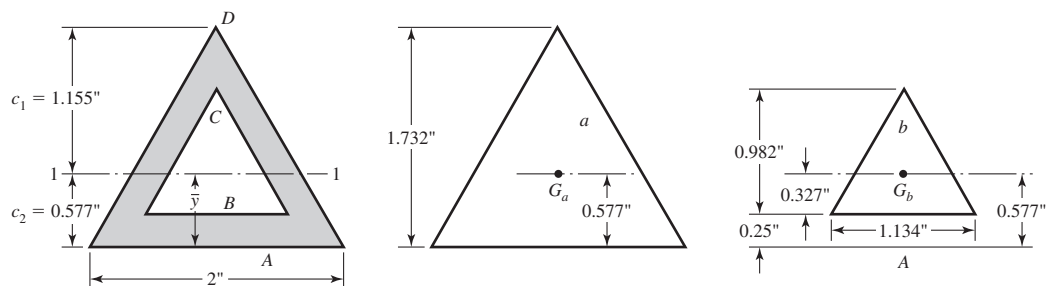
$$\sigma_A = \frac{10000(0.667)}{0.158} = 42(10)^3 \text{ psi} \quad \text{Ans.}$$

$$\sigma_B = \frac{10000(0.667 - 0.375)}{0.158} = 18.5(10)^3 \text{ psi} \quad \text{Ans.}$$

$$\sigma_C = \frac{10000(0.167 - 0.125)}{0.158} = 2.7(10)^3 \text{ psi} \quad \text{Ans.}$$

$$\sigma_D = -\frac{10000(0.833)}{0.158} = -52.7(10)^3 \text{ psi} \quad \text{Ans.}$$

(b)



Here we treat the hole as a negative area.

$$A_a = 1.732 \text{ in}^2$$

$$A_b = 1.134 \left(\frac{0.982}{2} \right) = 0.557 \text{ in}^2$$

$$A = 1.732 - 0.557 = 1.175 \text{ in}^2$$

$$\bar{y} = \frac{1.732(0.577) - 0.557(0.577)}{1.175} = 0.577 \text{ in} \quad \text{Ans.}$$

$$I_a = \frac{bh^3}{36} = \frac{2(1.732)^3}{36} = 0.289 \text{ in}^4$$

$$I_b = \frac{1.134(0.982)^3}{36} = 0.0298 \text{ in}^4$$

$$I_1 = I_a - I_b = 0.289 - 0.0298 = 0.259 \text{ in}^4 \quad \text{Ans.}$$

because the centroids are coincident.

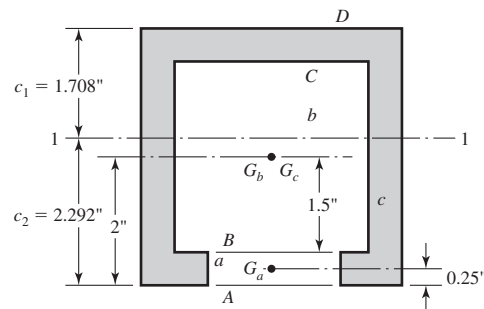
$$\sigma_A = \frac{10\,000(0.577)}{0.259} = 22.3(10)^3 \text{ psi} \quad \text{Ans.}$$

$$\sigma_B = \frac{10\,000(0.327)}{0.259} = 12.6(10)^3 \text{ psi} \quad \text{Ans.}$$

$$\sigma_C = -\frac{10\,000(0.982 - 0.327)}{0.259} = -25.3(10)^3 \text{ psi} \quad \text{Ans.}$$

$$\sigma_D = -\frac{10\,000(1.155)}{0.259} = -44.6(10)^3 \text{ psi} \quad \text{Ans.}$$

(c) Use two negative areas.



$$A_a = 1 \text{ in}^2, \quad A_b = 9 \text{ in}^2, \quad A_c = 16 \text{ in}^2, \quad A = 16 - 9 - 1 = 6 \text{ in}^2;$$

$$\bar{y}_a = 0.25 \text{ in}, \quad \bar{y}_b = 2.0 \text{ in}, \quad \bar{y}_c = 2 \text{ in}$$

$$\bar{y} = \frac{16(2) - 9(2) - 1(0.25)}{6} = 2.292 \text{ in} \quad \text{Ans.}$$

$$c_1 = 4 - 2.292 = 1.708 \text{ in}$$

$$I_a = \frac{2(0.5)^3}{12} = 0.02083 \text{ in}^4$$

$$I_b = \frac{3(3)^3}{12} = 6.75 \text{ in}^4$$

$$I_c = \frac{4(4)^3}{12} = 21.333 \text{ in}^4$$

$$I_1 = [21.333 + 16(0.292)^2] - [6.75 + 9(0.292)^2] \\ - [0.02083 + 1(2.292 - 0.25)^2] \\ = 10.99 \text{ in}^4 \quad \text{Ans.}$$

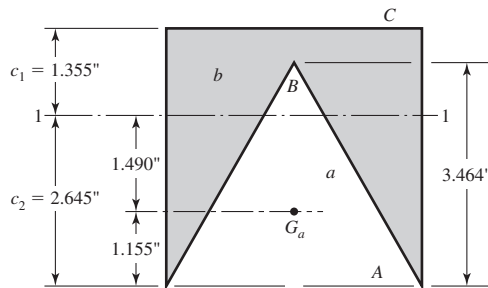
$$\sigma_A = \frac{10\,000(2.292)}{10.99} = 2086 \text{ psi} \quad \text{Ans.}$$

$$\sigma_B = \frac{10\,000(2.292 - 0.5)}{10.99} = 1631 \text{ psi} \quad \text{Ans.}$$

$$\sigma_C = -\frac{10\,000(1.708 - 0.5)}{10.99} = -1099 \text{ psi} \quad \text{Ans.}$$

$$\sigma_D = -\frac{10\,000(1.708)}{10.99} = -1554 \text{ psi} \quad \text{Ans.}$$

(d) Use a as a negative area.



$$A_a = 6.928 \text{ in}^2, \quad A_b = 16 \text{ in}^2, \quad A = 9.072 \text{ in}^2;$$

$$\bar{y}_a = 1.155 \text{ in}, \quad \bar{y}_b = 2 \text{ in}$$

$$\bar{y} = \frac{2(16) - 1.155(6.928)}{9.072} = 2.645 \text{ in} \quad \text{Ans.}$$

$$c_1 = 4 - 2.645 = 1.355 \text{ in}$$

$$I_a = \frac{bh^3}{36} = \frac{4(3.464)^3}{36} = 4.618 \text{ in}^4$$

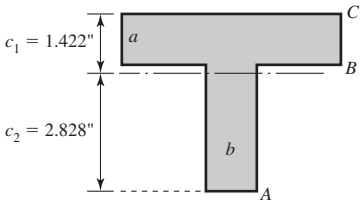
$$I_b = \frac{4(4)^3}{12} = 21.33 \text{ in}^4$$

$$I_1 = [21.33 + 16(0.645)^2] - [4.618 + 6.928(1.490)^2] \\ = 7.99 \text{ in}^4 \quad \text{Ans.}$$

$$\sigma_A = \frac{10\,000(2.645)}{7.99} = 3310 \text{ psi} \quad \text{Ans.}$$

$$\sigma_B = -\frac{10\,000(3.464 - 2.645)}{7.99} = -1025 \text{ psi} \quad \text{Ans.}$$

$$\sigma_C = -\frac{10\,000(1.355)}{7.99} = -1696 \text{ psi} \quad \text{Ans.}$$

(e)  $A_a = 6(1.25) = 7.5 \text{ in}^2$
 $A_b = 3(1.5) = 4.5 \text{ in}^2$
 $A = A_c + A_b = 12 \text{ in}^2$
 $\bar{y} = \frac{3.625(7.5) + 1.5(4.5)}{12} = 2.828 \text{ in} \quad \text{Ans.}$

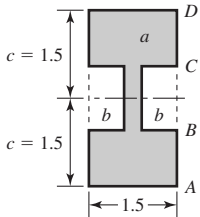
$$I = \frac{1}{12}(6)(1.25)^3 + 7.5(3.625 - 2.828)^2 + \frac{1}{12}(1.5)(3)^3 + 4.5(2.828 - 1.5)^2$$

$$= 17.05 \text{ in}^4 \quad \text{Ans.}$$

$$\sigma_A = \frac{10\,000(2.828)}{17.05} = 1659 \text{ psi} \quad \text{Ans.}$$

$$\sigma_B = -\frac{10\,000(3 - 2.828)}{17.05} = -101 \text{ psi} \quad \text{Ans.}$$

$$\sigma_C = -\frac{10\,000(1.422)}{17.05} = -834 \text{ psi} \quad \text{Ans.}$$

(f)  Let $a = \text{total area}$
 $A = 1.5(3) - 1(1.25) = 3.25 \text{ in}^2$
 $I = I_a - 2I_b = \frac{1}{12}(1.5)(3)^3 - \frac{1}{12}(1.25)(1)^3$
 $= 3.271 \text{ in}^4 \quad \text{Ans.}$

$$\sigma_A = \frac{10\,000(1.5)}{3.271} = 4586 \text{ psi}, \quad \sigma_D = -4586 \text{ psi} \quad \text{Ans.}$$

$$\sigma_B = \frac{10\,000(0.5)}{3.271} = 1529 \text{ psi}, \quad \sigma_C = -1529 \text{ psi}$$

3-24

(a) The moment is maximum and constant between A and B

$$M = -50(20) = -1000 \text{ lbf} \cdot \text{in}, \quad I = \frac{1}{12}(0.5)(2)^3 = 0.3333 \text{ in}^4$$

$$\rho = \left| \frac{EI}{M} \right| = \frac{1.6(10^6)(0.3333)}{1000} = 533.3 \text{ in}$$

$$(x, y) = (30, -533.3) \text{ in} \quad \text{Ans.}$$

(b) The moment is maximum and constant between A and B

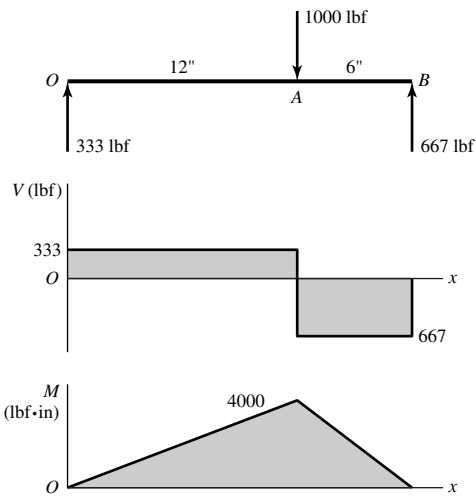
$$M = 50(5) = 250 \text{ lbf} \cdot \text{in}, \quad I = 0.3333 \text{ in}^4$$

$$\rho = \frac{1.6(10^6)(0.3333)}{250} = 2133 \text{ in} \quad \text{Ans.}$$

$$(x, y) = (20, 2133) \text{ in} \quad \text{Ans.}$$

3-25

(a)



$$I = \frac{1}{12}(0.75)(1.5)^3 = 0.2109 \text{ in}^4$$

$$A = 0.75(1.5) = 1.125 \text{ in}$$

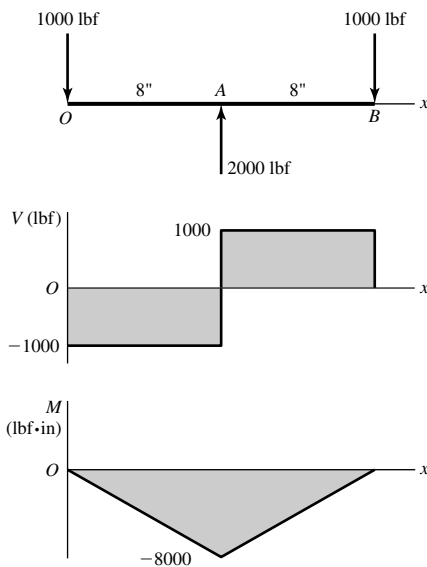
M_{\max} is at A. At the bottom of the section,

$$\sigma_{\max} = \frac{Mc}{I} = \frac{4000(0.75)}{0.2109} = 14\,225 \text{ psi} \quad \text{Ans.}$$

Due to V , τ_{\max} constant is between A and B at $y = 0$

$$\tau_{\max} = \frac{3V}{2A} = \frac{3 \cdot 667}{2 \cdot 1.125} = 889 \text{ psi} \quad \text{Ans.}$$

(b)



$$I = \frac{1}{12}(1)(2)^3 = 0.6667 \text{ in}^4$$

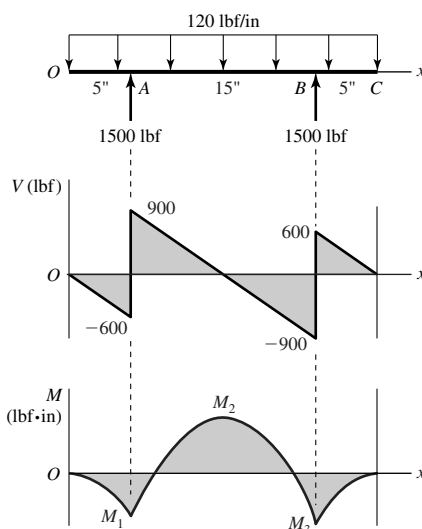
M_{\max} is at A at the top of the beam

$$\sigma_{\max} = \frac{8000(1)}{0.6667} = 12\,000 \text{ psi} \quad \text{Ans.}$$

$|V_{\max}| = 1000 \text{ lbf}$ from O to B at $y = 0$

$$\tau_{\max} = \frac{3V}{2A} = \frac{3 \cdot 1000}{2 \cdot (2)(1)} = 750 \text{ psi} \quad \text{Ans.}$$

(c)



$$I = \frac{1}{12}(0.75)(2)^3 = 0.5 \text{ in}^4$$

$$M_1 = -\frac{1}{2}600(5) = -1500 \text{ lbf} \cdot \text{in} = M_3$$

$$M_2 = -1500 + \frac{1}{2}(900)(7.5) = 1875 \text{ lbf} \cdot \text{in}$$

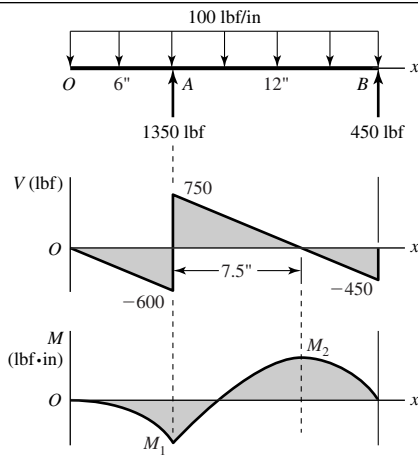
M_{\max} is at span center. At the bottom of the beam,

$$\sigma_{\max} = \frac{1875(1)}{0.5} = 3750 \text{ psi} \quad \text{Ans.}$$

At A and B at $y = 0$

$$\tau_{\max} = \frac{3}{2} \frac{900}{(0.75)(2)} = 900 \text{ psi} \quad \text{Ans.}$$

(d)



$$I = \frac{1}{12}(1)(2)^3 = 0.6667 \text{ in}^4$$

$$M_1 = -\frac{600}{2}(6) = -1800 \text{ lbf} \cdot \text{in}$$

$$M_2 = -1800 + \frac{1}{2}750(7.5) = 1013 \text{ lbf} \cdot \text{in}$$

At A, top of beam

$$\sigma_{\max} = \frac{1800(1)}{0.6667} = 2700 \text{ psi} \quad \text{Ans.}$$

At A, $y = 0$

$$\tau_{\max} = \frac{3}{2} \frac{750}{(2)(1)} = 563 \text{ psi} \quad \text{Ans.}$$

3-26

$$M_{\max} = \frac{wl^2}{8} \Rightarrow \sigma_{\max} = \frac{wl^2c}{8I} \Rightarrow w = \frac{8\sigma I}{cl^2}$$

(a) $l = 12(12) = 144 \text{ in}$, $I = (1/12)(1.5)(9.5)^3 = 107.2 \text{ in}^4$

$$w = \frac{8(1200)(107.2)}{4.75(144^2)} = 10.4 \text{ lbf/in} \quad \text{Ans.}$$

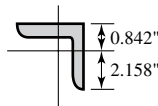
(b) $l = 48 \text{ in}$, $I = (\pi/64)(2^4 - 1.25^4) = 0.6656 \text{ in}^4$

$$w = \frac{8(12)(10^3)(0.6656)}{1(48)^2} = 27.7 \text{ lbf/in} \quad \text{Ans.}$$

(c) $l = 48 \text{ in}$, $I = (1/12)(2)(3^3) - (1/12)(1.625)(2.625^3) = 2.051 \text{ in}^4$

$$w = \frac{8(12)(10^3)(2.051)}{1.5(48)^2} = 57.0 \text{ lbf/in} \quad \text{Ans.}$$

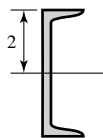
(d) $l = 72 \text{ in}$; Table A-6, $I = 2(1.24) = 2.48 \text{ in}^4$



$$c_{\max} = 2.158 \text{ in}$$

$$w = \frac{8(12)(10^3)(2.48)}{2.158(72)^2} = 21.3 \text{ lbf/in} \quad \text{Ans.}$$

(e) $l = 72 \text{ in}$; Table A-7, $I = 3.85 \text{ in}^4$

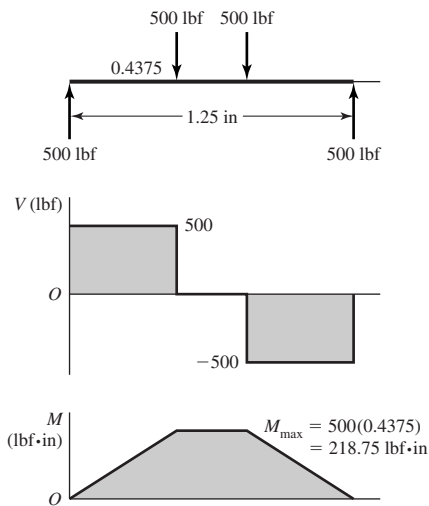


$$w = \frac{8(12)(10^3)(3.85)}{2(72)^2} = 35.6 \text{ lbf/in} \quad \text{Ans.}$$

(f) $l = 72 \text{ in}$, $I = (1/12)(1)(4^3) = 5.333 \text{ in}^4$

$$w = \frac{8(12)(10^3)(5.333)}{(2)(72)^2} = 49.4 \text{ lbf/in} \quad \text{Ans.}$$

3-27 (a) Model (c)



$$I = \frac{\pi}{64}(0.5^4) = 3.068(10^{-3}) \text{ in}^4$$

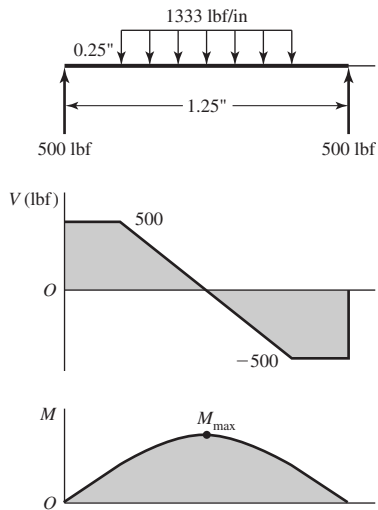
$$A = \frac{\pi}{4}(0.5^2) = 0.1963 \text{ in}^2$$

$$\sigma = \frac{Mc}{I} = \frac{218.75(0.25)}{3.068(10^{-3})}$$

$$= 17\,825 \text{ psi} = 17.8 \text{ kpsi} \quad \text{Ans.}$$

$$\tau_{\max} = \frac{4V}{3A} = \frac{4 \cdot 500}{3 \cdot 0.1963} = 3400 \text{ psi} \quad \text{Ans.}$$

(b) Model (d)



$$M_{\max} = 500(0.25) + \frac{1}{2}(500)(0.375)$$

$$= 218.75 \text{ lbf} \cdot \text{in}$$

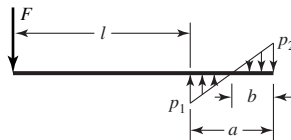
$$V_{\max} = 500 \text{ lbf}$$

Same M and V

$$\therefore \sigma = 17.8 \text{ kpsi} \quad \text{Ans.}$$

$$\tau_{\max} = 3400 \text{ psi} \quad \text{Ans.}$$

3-28



$$q = -F\langle x \rangle^{-1} + p_1\langle x - l \rangle^0 - \frac{p_1 + p_2}{a}\langle x - l \rangle^1 + \text{terms for } x > l + a$$

$$V = -F + p_1\langle x - l \rangle^1 - \frac{p_1 + p_2}{2a}\langle x - l \rangle^2 + \text{terms for } x > l + a$$

$$M = -Fx + \frac{p_1}{2}\langle x - l \rangle^2 - \frac{p_1 + p_2}{6a}\langle x - l \rangle^3 + \text{terms for } x > l + a$$

At $x = (l + a)^+$, $V = M = 0$, terms for $x > l + a = 0$

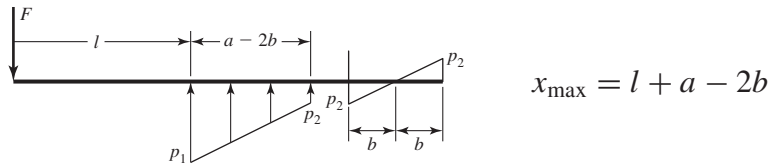
$$-F + p_1a - \frac{p_1 + p_2}{2a}a^2 = 0 \quad \Rightarrow \quad p_1 - p_2 = \frac{2F}{a} \quad (1)$$

$$-F(l+a) + \frac{p_1 a^2}{2} - \frac{p_1 + p_2}{6a} a^3 = 0 \Rightarrow 2p_1 - p_2 = \frac{6F(l+a)}{a^2} \quad (2)$$

From (1) and (2) $p_1 = \frac{2F}{a^2}(3l+2a), \quad p_2 = \frac{2F}{a^2}(3l+a)$ (3)

From similar triangles $\frac{b}{p_2} = \frac{a}{p_1 + p_2} \Rightarrow b = \frac{ap_2}{p_1 + p_2}$ (4)

M_{\max} occurs where $V = 0$



$$\begin{aligned} M_{\max} &= -F(l+a-2b) + \frac{p_1}{2}(a-2b)^2 - \frac{p_1+p_2}{6a}(a-2b)^3 \\ &= -Fl - F(a-2b) + \frac{p_1}{2}(a-2b)^2 - \frac{p_1+p_2}{6a}(a-2b)^3 \end{aligned}$$

Normally $M_{\max} = -Fl$

The fractional increase in the magnitude is

$$\Delta = \frac{F(a-2b) - (p_1/2)(a-2b)^2 - [(p_1+p_2)/6a](a-2b)^3}{Fl} \quad (5)$$

For example, consider $F = 1500$ lbf, $a = 1.2$ in, $l = 1.5$ in

$$(3) \quad p_1 = \frac{2(1500)}{1.2^2}[3(1.5) + 2(1.2)] = 14375 \text{ lbf/in}$$

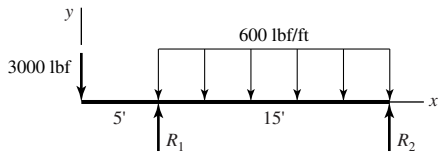
$$p_2 = \frac{2(1500)}{1.2^2}[3(1.5) + 1.2] = 11875 \text{ lbf/in}$$

$$(4) \quad b = 1.2(11875)/(14375 + 11875) = 0.5429 \text{ in}$$

Substituting into (5) yields

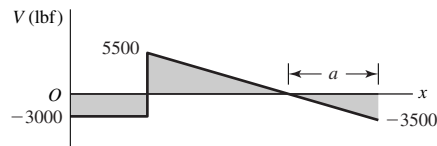
$$\Delta = 0.03689 \quad \text{or} \quad 3.7\% \text{ higher than } -Fl$$

3-29

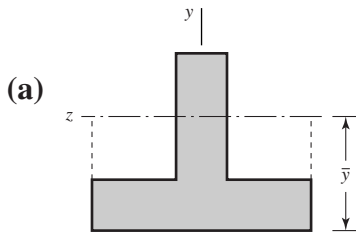
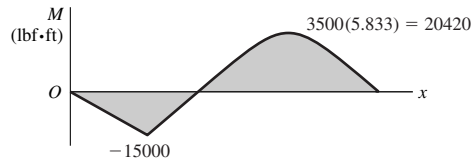


$$R_1 = \frac{600(15)}{2} + \frac{20}{15}3000 = 8500 \text{ lbf}$$

$$R_2 = \frac{600(15)}{2} - \frac{5}{15}3000 = 3500 \text{ lbf}$$



$$a = \frac{3500}{600} = 5.833 \text{ ft}$$



$$\bar{y} = \frac{1(12) + 5(12)}{24} = 3 \text{ in}$$

$$I_z = \frac{1}{3}[2(5^3) + 6(3^3) - 4(1^3)] = 136 \text{ in}^4$$

At $x = 5 \text{ ft}$, $y = -3 \text{ in}$, $\sigma_x = -\frac{-15000(12)(-3)}{136} = -3970 \text{ psi}$

$y = 5 \text{ in}$, $\sigma_x = -\frac{-15000(12)5}{136} = 6620 \text{ psi}$

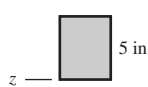
At $x = 14.17 \text{ ft}$, $y = -3 \text{ in}$, $\sigma_x = -\frac{20420(12)(-3)}{136} = 5405 \text{ psi}$

$y = 5 \text{ in}$, $\sigma_x = -\frac{20420(12)5}{136} = -9010 \text{ psi}$

Max tension = 6620 psi *Ans.*

Max compression = -9010 psi *Ans.*

(b) $V_{\max} = 5500 \text{ lbf}$

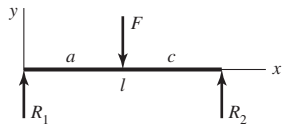


$$Q_{\text{n.a.}} = \bar{y}A = 2.5(5)(2) = 25 \text{ in}^3$$

$$\tau_{\max} = \frac{VQ}{Ib} = \frac{5500(25)}{136(2)} = 506 \text{ psi} \quad \text{Ans.}$$

(c) $\tau_{\max} = \frac{|\sigma_{\max}|}{2} = \frac{9010}{2} = 4510 \text{ psi} \quad \text{Ans.}$

3-30



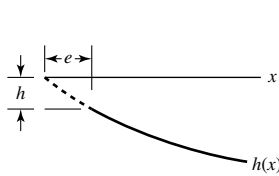
$$R_1 = \frac{c}{l}F$$

$$M = \frac{c}{l}Fx \quad 0 \leq x \leq a$$

$$\sigma = \frac{6M}{bh^2} = \frac{6(c/l)Fx}{bh^2} \Rightarrow h = \sqrt{\frac{6cFx}{bl\sigma_{\max}}} \quad 0 \leq x \leq a \quad \text{Ans.}$$

3-31 From Prob. 3-30, $R_1 = \frac{c}{l}F = V$, $0 \leq x \leq a$

$$\tau_{\max} = \frac{3V}{2bh} = \frac{3(c/l)F}{2bh} \quad \therefore h = \frac{3Fc}{2lb\tau_{\max}} \quad \text{Ans.}$$

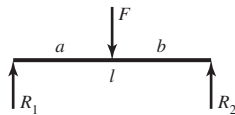


$$\text{From Prob. 3-30} = \sqrt{\frac{6Fcx}{lb\sigma_{\max}}} \quad \text{sub in } x = e \text{ and equate to } h \text{ above}$$

$$\frac{3Fc}{2lb\tau_{\max}} = \sqrt{\frac{6Fce}{lb\sigma_{\max}}}$$

$$e = \frac{3Fc\sigma_{\max}}{8lb\tau_{\max}^2} \quad \text{Ans.}$$

3-32



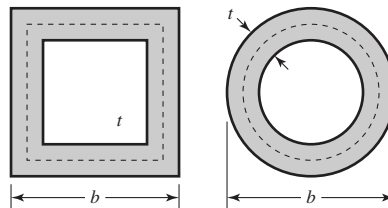
$$R_1 = \frac{b}{l}F$$

$$M = \frac{b}{l}Fx$$

$$\sigma_{\max} = \frac{32M}{\pi d^3} = \frac{32b}{\pi d^3 l}Fx$$

$$d = \left[\frac{32bFx}{\pi l\sigma_{\max}} \right]^{1/3} \quad 0 \leq x \leq a \quad \text{Ans.}$$

3-33



Square:

$$A_m = (b - t)^2$$

$$T_{\text{sq}} = 2A_m t \tau_{\text{all}} = 2(b - t)^2 t \tau_{\text{all}}$$

Round:

$$A_m = \pi(b - t)^2/4$$

$$T_{\text{rd}} = 2\pi(b - t)^2 t \tau_{\text{all}}/4$$

Ratio of torques

$$\frac{T_{\text{sq}}}{T_{\text{rd}}} = \frac{2(b-t)^2 t \tau_{\text{all}}}{\pi(b-t)^2 t \tau_{\text{all}}/2} = \frac{4}{\pi} = 1.27$$

Twist per unit length
square:

$$\theta_{\text{sq}} = \frac{2G\theta_1 t}{t \tau_{\text{all}}} \left(\frac{L}{A} \right)_m = C \left| \frac{L}{A} \right|_m = C \frac{4(b-t)}{(b-t)^2}$$

Round:

$$\theta_{\text{rd}} = C \left(\frac{L}{A} \right)_m = C \frac{\pi(b-t)}{\pi(b-t)^2/4} = C \frac{4(b-t)}{(b-t)^2}$$

Ratio equals 1, twists are the same.

Note the weight ratio is

$$\begin{aligned} \frac{W_{\text{sq}}}{W_{\text{rd}}} &= \frac{\rho l(b-t)^2}{\rho l \pi(b-t)t} = \frac{b-t}{\pi t} && \text{thin-walled assumes } b \geq 20t \\ &= \frac{19}{\pi} = 6.04 && \text{with } b = 20t \\ &= 2.86 && \text{with } b = 10t \end{aligned}$$

3-34 $l = 40$ in, $\tau_{\text{all}} = 11\,500$ psi, $G = 11.5(10^6)$ psi, $t = 0.050$ in

$$\begin{aligned} r_m &= r_i + t/2 = r_i + 0.025 && \text{for } r_i > 0 \\ &= 0 && \text{for } r_i = 0 \end{aligned}$$

$$A_m = (1 - 0.05)^2 - 4 \left(r_m^2 - \frac{\pi}{4} r_m^2 \right) = 0.95^2 - (4 - \pi) r_m^2$$

$$L_m = 4(1 - 0.05 - 2r_m + 2\pi r_m/4) = 4[0.95 - (2 - \pi/2)r_m]$$

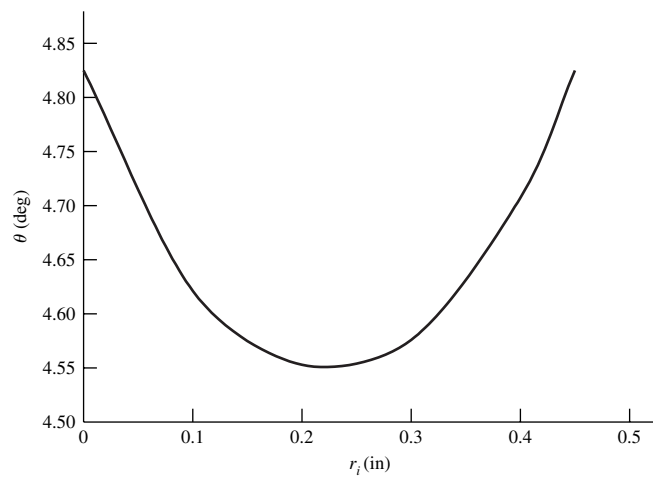
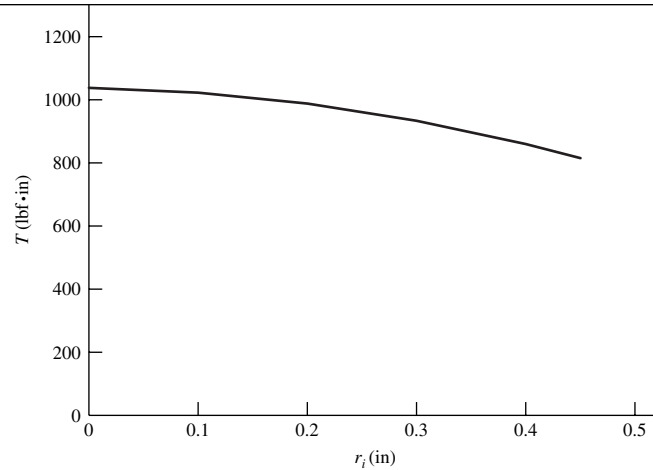
Eq. (3-45): $T = 2A_m t \tau = 2(0.05)(11\,500)A_m = 1150A_m$

Eq. (3-46):

$$\begin{aligned} \theta(\text{deg}) &= \theta_1 l \frac{180}{\pi} = \frac{TL_m l}{4GA_m^2 t} \frac{180}{\pi} = \frac{TL_m(40)}{4(11.5)(10^6)A_m^2(0.05)} \frac{180}{\pi} \\ &= 9.9645(10^{-4}) \frac{TL_m}{A_m^2} \end{aligned}$$

Equations can then be put into a spreadsheet resulting in:

r_i	r_m	A_m	L_m	r_i	$T(\text{lb} \cdot \text{in})$	r_i	$\theta(\text{deg})$
0	0	0.9025	3.8	0	1037.9	0	4.825
0.10	0.125	0.889087	3.585398	0.10	1022.5	0.10	4.621
0.20	0.225	0.859043	3.413717	0.20	987.9	0.20	4.553
0.30	0.325	0.811831	3.242035	0.30	933.6	0.30	4.576
0.40	0.425	0.747450	3.070354	0.40	859.6	0.40	4.707
0.45	0.475	0.708822	2.984513	0.45	815.1	0.45	4.825



Torque carrying capacity reduces with r_i . However, this is based on an assumption of uniform stresses which is not the case for small r_i . Also note that weight also goes down with an increase in r_i .

3-35 From Eq. (3-47) where θ_1 is the same for each leg.

$$T_1 = \frac{1}{3}G\theta_1 L_1 c_1^3, \quad T_2 = \frac{1}{3}G\theta_1 L_2 c_2^3$$

$$T = T_1 + T_2 = \frac{1}{3}G\theta_1 (L_1 c_1^3 + L_2 c_2^3) = \frac{1}{3}G\theta_1 \sum L_i c_i^3 \quad \text{Ans.}$$

$$\tau_1 = G\theta_1 c_1, \quad \tau_2 = G\theta_1 c_2$$

$$\tau_{\max} = G\theta_1 c_{\max} \quad \text{Ans.}$$

3-36

(a) $\tau_{\max} = G\theta_1 c_{\max}$

$$G\theta_1 = \frac{\tau_{\max}}{c_{\max}} = \frac{12\,000}{1/8} = 9.6(10^4) \text{ psi/in}$$

$$T_{1/16} = \frac{1}{3}G\theta_1 (Lc^3)_{1/16} = \frac{1}{3}(9.6)(10^4)(5/8)(1/16)^3 = 4.88 \text{ lbf} \cdot \text{in} \quad \text{Ans.}$$

$$T_{1/8} = \frac{1}{3}(9.6)(10^4)(5/8)(1/8)^3 = 39.06 \text{ lbf} \cdot \text{in} \quad \text{Ans.}$$

$$\tau_{1/16} = 9.6(10^4)1/16 = 6000 \text{ psi}, \quad \tau_{1/8} = 9.6(10^4)1/8 = 12\,000 \text{ psi} \quad \text{Ans.}$$

$$(b) \quad \theta_1 = \frac{9.6(10^4)}{12(10^6)} = 87(10^{-3}) \text{ rad/in} = 0.458^\circ/\text{in} \quad \text{Ans.}$$

3-37 *Separate strips:* For each 1/16 in thick strip,

$$T = \frac{Lc^2\tau}{3} = \frac{(1)(1/16)^2(12\,000)}{3} = 15.625 \text{ lbf} \cdot \text{in}$$

$$\therefore T_{\max} = 2(15.625) = 31.25 \text{ lbf} \cdot \text{in} \quad \text{Ans.}$$

For each strip,

$$\theta = \frac{3Tl}{Lc^3G} = \frac{3(15.625)(12)}{(1)(1/16)^3(12)(10^6)} = 0.192 \text{ rad} \quad \text{Ans.}$$

$$k_t = T/\theta = 31.25/0.192 = 162.8 \text{ lbf} \cdot \text{in/rad} \quad \text{Ans.}$$

Solid strip: From Eq. (3-47),

$$T_{\max} = \frac{Lc^2\tau}{3} = \frac{1(1/8)^2(12\,000)}{3} = 62.5 \text{ lbf} \cdot \text{in} \quad \text{Ans.}$$

$$\theta = \theta_1 l = \frac{\tau l}{Gc} = \frac{12\,000(12)}{12(10^6)(1/8)} = 0.0960 \text{ rad} \quad \text{Ans.}$$

$$k_l = 62.5/0.0960 = 651 \text{ lbf} \cdot \text{in/rad} \quad \text{Ans.}$$

3-38 $\tau_{\text{all}} = 60 \text{ MPa}$, $H = 35 \text{ kW}$

(a) $n = 2000 \text{ rpm}$

$$\text{Eq. (4-40)} \quad T = \frac{9.55H}{n} = \frac{9.55(35)10^3}{2000} = 167.1 \text{ N} \cdot \text{m}$$

$$\tau_{\max} = \frac{16T}{\pi d^3} \Rightarrow d = \left(\frac{16T}{\pi \tau_{\max}} \right)^{1/3} = \left[\frac{16(167.1)}{\pi(60)10^6} \right]^{1/3} = 24.2(10^{-3}) \text{ m} = 24.2 \text{ mm} \quad \text{Ans.}$$

(b) $n = 200 \text{ rpm}$ $\therefore T = 1671 \text{ N} \cdot \text{m}$

$$d = \left[\frac{16(1671)}{\pi(60)10^6} \right]^{1/3} = 52.2(10^{-3}) \text{ m} = 52.2 \text{ mm} \quad \text{Ans.}$$

3-39 $\tau_{\text{all}} = 110 \text{ MPa}$, $\theta = 30^\circ$, $d = 15 \text{ mm}$, $l = ?$

$$\tau = \frac{16T}{\pi d^3} \Rightarrow T = \frac{\pi}{16} \tau d^3$$

$$\theta = \frac{Tl}{JG} \left(\frac{180}{\pi} \right)$$

$$l = \frac{\pi J G \theta}{180 T} = \frac{\pi}{180} \left[\frac{\pi d^4 G \theta}{32 (\pi/16) \tau d^3} \right] = \frac{\pi d G \theta}{360 \tau}$$

$$= \frac{\pi (0.015)(79.3)(10^9)(30)}{360 \cdot 110(10^6)} = 2.83 \text{ m} \quad \text{Ans.}$$

3-40 $d = 3$ in, replaced by 3 in hollow with $t = 1/4$ in

$$(a) \quad T_{\text{solid}} = \frac{\pi}{16} \tau (3^3) \quad T_{\text{hollow}} = \frac{\pi}{32} \tau \frac{(3^4 - 2.5^4)}{1.5}$$

$$\% \Delta T = \frac{(\pi/16)(3^3) - (\pi/32)[(3^4 - 2.5^4)/1.5]}{(\pi/16)(3^3)} (100) = 48.2\% \quad \text{Ans.}$$

$$(b) \quad W_{\text{solid}} = k d^2 = k(3^2), \quad W_{\text{hollow}} = k(3^2 - 2.5^2)$$

$$\% \Delta W = \frac{k(3^2) - k(3^2 - 2.5^2)}{k(3^2)} (100) = 69.4\% \quad \text{Ans.}$$

3-41 $T = 5400 \text{ N} \cdot \text{m}$, $\tau_{\text{all}} = 150 \text{ MPa}$

$$(a) \quad \tau = \frac{T c}{J} \Rightarrow 150(10^6) = \frac{5400(d/2)}{(\pi/32)[d^4 - (0.75d)^4]} = \frac{4.023(10^4)}{d^3}$$

$$d = \left(\frac{4.023(10^4)}{150(10^6)} \right)^{1/3} = 6.45(10^{-2}) \text{ m} = 64.5 \text{ mm}$$

From Table A-17, the next preferred size is $d = 80 \text{ mm}$; $ID = 60 \text{ mm}$ *Ans.*

$$(b) \quad J = \frac{\pi}{32} (0.08^4 - 0.06^4) = 2.749(10^{-6}) \text{ mm}^4$$

$$\tau_i = \frac{5400(0.030)}{2.749(10^{-6})} = 58.9(10^6) \text{ Pa} = 58.9 \text{ MPa} \quad \text{Ans.}$$

3-42

$$(a) \quad T = \frac{63\,025H}{n} = \frac{63\,025(1)}{5} = 12\,605 \text{ lbf} \cdot \text{in}$$

$$\tau = \frac{16T}{\pi d_C^3} \Rightarrow d_C = \left(\frac{16T}{\pi \tau} \right)^{1/3} = \left[\frac{16(12\,605)}{\pi(14\,000)} \right]^{1/3} = 1.66 \text{ in} \quad \text{Ans.}$$

From Table A-17, select $1\,3/4$ in

$$\tau_{\text{start}} = \frac{16(2)(12\,605)}{\pi(1.75^3)} = 23.96(10^3) \text{ psi} = 23.96 \text{ kpsi}$$

(b) design activity

3-43 $\omega = 2\pi n/60 = 2\pi(8)/60 = 0.8378 \text{ rad/s}$

$$T = \frac{H}{\omega} = \frac{1000}{0.8378} = 1194 \text{ N} \cdot \text{m}$$

$$d_C = \left(\frac{16T}{\pi\tau} \right)^{1/3} = \left[\frac{16(1194)}{\pi(75)(10^6)} \right]^{1/3} = 4.328(10^{-2}) \text{ m} = 43.3 \text{ mm}$$

From Table A-17, select 45 mm *Ans.*

3-44 $s = \sqrt{A}$, $d = \sqrt{4A/\pi}$

Square: Eq. (3-43) with $b = c$

$$\tau_{\max} = \frac{4.8T}{c^3}$$

$$(\tau_{\max})_{\text{sq}} = \frac{4.8T}{(A)^{3/2}}$$

Round: $(\tau_{\max})_{\text{rd}} = \frac{16T}{\pi d^3} = \frac{16T}{\pi(4A/\pi)^{3/2}} = \frac{3.545T}{(A)^{3/2}}$

$$\frac{(\tau_{\max})_{\text{sq}}}{(\tau_{\max})_{\text{rd}}} = \frac{4.8}{3.545} = 1.354$$

Square stress is 1.354 times the round stress *Ans.*

3-45 $s = \sqrt{A}$, $d = \sqrt{4A/\pi}$

Square: Eq. (3-44) with $b = c$, $\beta = 0.141$

$$\theta_{\text{sq}} = \frac{Tl}{0.141c^4G} = \frac{Tl}{0.141(A)^{4/2}G}$$

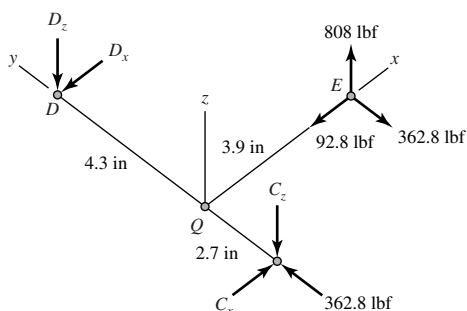
Round:

$$\theta_{\text{rd}} = \frac{Tl}{JG} = \frac{Tl}{(\pi/32)(4A/\pi)^{4/2}G} = \frac{6.2832Tl}{(A)^{4/2}G}$$

$$\frac{\theta_{\text{sq}}}{\theta_{\text{rd}}} = \frac{1/0.141}{6.2832} = 1.129$$

Square has greater θ by a factor of 1.13 *Ans.*

3-46



$$\left(\sum M_D\right)_z = 7C_x - 4.3(92.8) - 3.9(362.8) = 0$$

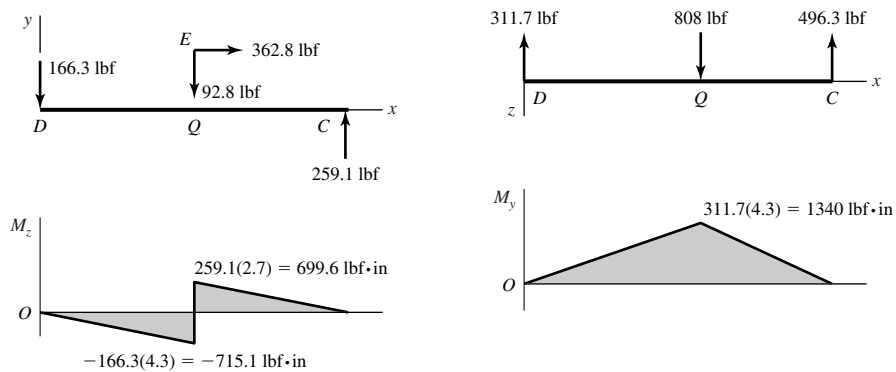
$$C_x = 259.1 \text{ lbf}$$

$$\left(\sum M_C\right)_z = -7D_x - 2.7(92.8) + 3.9(362.8) = 0$$

$$D_x = 166.3 \text{ lbf}$$

$$\left(\sum M_D\right)_x \Rightarrow C_z = \frac{4.3}{7} 808 = 496.3 \text{ lbf}$$

$$\left(\sum M_C\right)_x \Rightarrow D_z = \frac{2.7}{7} 808 = 311.7 \text{ lbf}$$



Torque : $T = 808(3.9) = 3151 \text{ lbf} \cdot \text{in}$
 $x=4.3_{\text{in}}^+$

Bending Q : $M = \sqrt{699.6^2 + 1340^2} = 1512 \text{ lbf} \cdot \text{in}$
 $x=4.3_{\text{in}}^+$

Torque:

$$\tau = \frac{16T}{\pi d^3} = \frac{16(3151)}{\pi(1.25^3)} = 8217 \text{ psi}$$

Bending:

$$\sigma_b = \pm \frac{32(1512)}{\pi(1.25^3)} = \pm 7885 \text{ psi}$$

Axial:

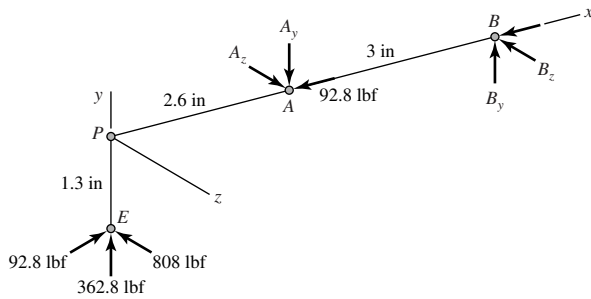
$$\sigma_a = -\frac{F}{A} = -\frac{362.8}{(\pi/4)(1.25^2)} = -296 \text{ psi}$$

$$|\sigma_{\max}| = 7885 + 296 = 8181 \text{ psi}$$

$$\tau_{\max} = \sqrt{\left(\frac{8181}{2}\right)^2 + 8217^2} = 9179 \text{ psi} \quad \text{Ans.}$$

$$\sigma_{\text{max tens.}} = \frac{7885 - 296}{2} + \sqrt{\left(\frac{7885 - 296}{2}\right)^2 + 8217^2} = 12\,845 \text{ psi} \quad \text{Ans.}$$

3-47



$$\left(\sum M_B\right)_z = -5.6(362.8) + 1.3(92.8) + 3A_y = 0$$

$$A_y = 637.0 \text{ lbf}$$

$$\left(\sum M_A\right)_z = -2.6(362.8) + 1.3(92.8) + 3B_y = 0$$

$$B_y = 274.2 \text{ lbf}$$

$$\left(\sum M_B\right)_y = 0 \Rightarrow A_z = \frac{5.6}{3}808 = 1508.3 \text{ lbf}$$

$$\left(\sum M_A\right)_y = 0 \Rightarrow B_z = \frac{2.6}{3}808 = 700.3 \text{ lbf}$$

$$\text{Torsion: } T = 808(1.3) = 1050 \text{ lbf} \cdot \text{in}$$

$$\tau = \frac{16(1050)}{\pi(1^3)} = 5348 \text{ psi}$$

$$\text{Bending: } M_p = 92.8(1.3) = 120.6 \text{ lbf} \cdot \text{in}$$

$$M_A = 3\sqrt{B_y^2 + B_z^2} = 3\sqrt{274.2^2 + 700.3^2}$$

$$= 2256 \text{ lbf} \cdot \text{in} = M_{\text{max}}$$

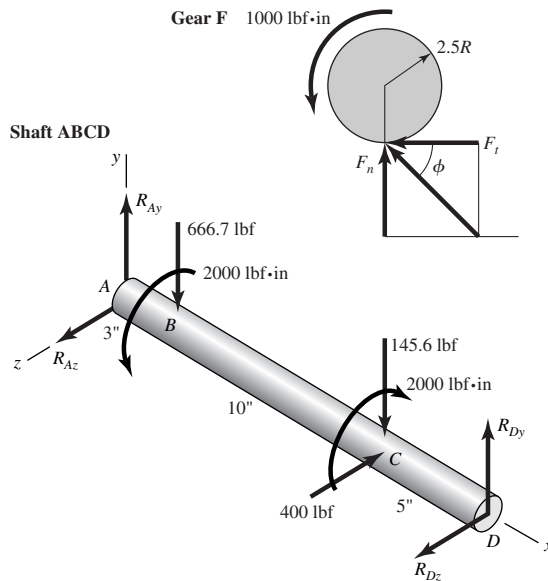
$$\sigma_b = \pm \frac{32(2256)}{\pi(1^3)} = \pm 22\,980 \text{ psi}$$

$$\text{Axial: } \sigma_{\text{inAP}} = -\frac{92.8}{(\pi/4)^2} = -120 \text{ psi}$$

$$\tau_{\text{max}} = \sqrt{\left(\frac{-22980 - 120}{2}\right)^2 + 5348^2} = 12\,730 \text{ psi} \quad \text{Ans.}$$

$$\sigma_{\text{max tens.}} = \frac{22980 - 120}{2} + \sqrt{\left(\frac{22980 - 120}{2}\right)^2 + 5348^2} = 24\,049 \text{ psi} \quad \text{Ans.}$$

3-48



$$F_t = \frac{1000}{2.5} = 400 \text{ lbf}$$

$$F_n = 400 \tan 20 = 145.6 \text{ lbf}$$

$$\text{Torque at } C \quad T_C = 400(5) = 2000 \text{ lbf} \cdot \text{in}$$

$$P = \frac{2000}{3} = 666.7 \text{ lbf}$$

$$\sum (M_A)_z = 0 \Rightarrow 18R_{Dy} - 145.6(13) - 666.7(3) = 0 \Rightarrow R_{Dy} = 216.3 \text{ lbf}$$

$$\sum (M_A)_y = 0 \Rightarrow -18R_{Dz} + 400(13) = 0 \Rightarrow R_{Dz} = 288.9 \text{ lbf}$$

$$\sum F_y = 0 \Rightarrow R_{Ay} + 216.3 - 666.7 - 145.6 = 0 \Rightarrow R_{Ay} = 596.0 \text{ lbf}$$

$$\sum F_z = 0 \Rightarrow R_{Az} + 288.9 - 400 = 0 \Rightarrow R_{Az} = 111.1 \text{ lbf}$$

$$M_B = 3\sqrt{596^2 + 111.1^2} = 1819 \text{ lbf} \cdot \text{in}$$

$$M_C = 5\sqrt{216.3^2 + 288.9^2} = 1805 \text{ lbf} \cdot \text{in}$$

\therefore Maximum stresses occur at B. *Ans.*

$$\sigma_B = \frac{32M_B}{\pi d^3} = \frac{32(1819)}{\pi(1.25^3)} = 9486 \text{ psi}$$

$$\tau_B = \frac{16T_B}{\pi d^3} = \frac{16(2000)}{\pi(1.25^3)} = 5215 \text{ psi}$$

$$\sigma_{\max} = \frac{\sigma_B}{2} + \sqrt{\left(\frac{\sigma_B}{2}\right)^2 + \tau_B^2} = \frac{9486}{2} + \sqrt{\left(\frac{9486}{2}\right)^2 + 5215^2} = 11792 \text{ psi} \quad \text{Ans.}$$

$$\tau_{\max} = \sqrt{\left(\frac{\sigma_B}{2}\right)^2 + \tau_B^2} = 7049 \text{ psi} \quad \text{Ans.}$$

3-49 $r = d/2$ (a) For top, $\theta = 90^\circ$,

$$\sigma_r = \frac{\sigma}{2}[1 - 1 + (1 - 1)(1 - 3)\cos 180] = 0 \quad \text{Ans.}$$

$$\sigma_{\theta} = \frac{\sigma}{2}[1 + 1 - (1 + 3)\cos 180] = 3\sigma \quad \text{Ans.}$$

$$\tau_{r\theta} = -\frac{\sigma}{2}(1 - 1)(1 + 3)\sin 180 = 0 \quad \text{Ans.}$$

For side, $\theta = 0^\circ$,

$$\sigma_r = \frac{\sigma}{2}[1 - 1 + (1 - 1)(1 - 3)\cos 0] = 0 \quad \text{Ans.}$$

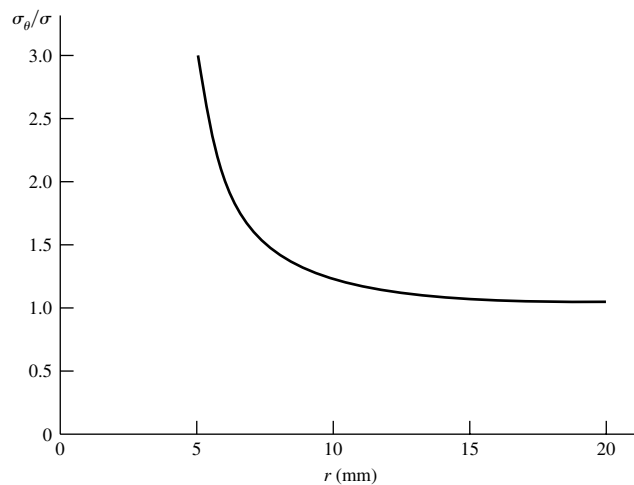
$$\sigma_{\theta} = \frac{\sigma}{2}[1 + 1 - (1 + 3)\cos 0] = -\sigma \quad \text{Ans.}$$

$$\tau_{r\theta} = -\frac{\sigma}{2}(1 - 1)(1 + 3)\sin 0 = 0 \quad \text{Ans.}$$

(b)

$$\sigma_{\theta}/\sigma = \frac{1}{2} \left[1 + \frac{100}{4r^2} - \left(1 + \frac{3 \cdot 10^4}{16 r^4} \right) \cos 180 \right] = \frac{1}{2} \left(2 + \frac{25}{r^2} + \frac{3 \cdot 10^4}{16 r^4} \right)$$

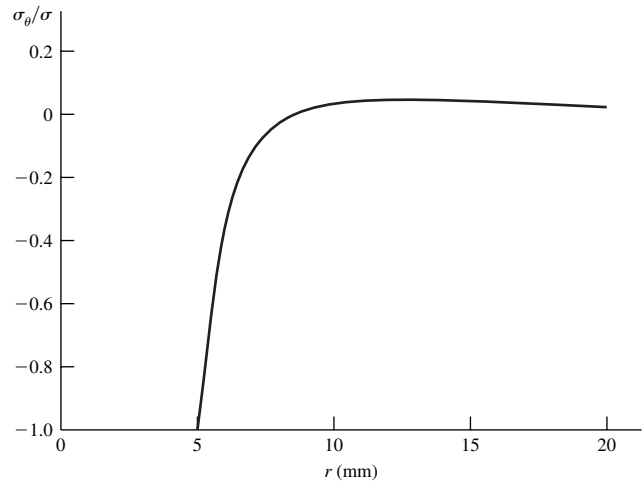
r	σ_{θ}/σ
5	3.000
6	2.071
7	1.646
8	1.424
9	1.297
10	1.219
11	1.167
12	1.132
13	1.107
14	1.088
15	1.074
16	1.063
17	1.054
18	1.048
19	1.042
20	1.037



(c)

$$\sigma_{\theta}/\sigma = \frac{1}{2} \left[1 + \frac{100}{4r^2} - \left(1 + \frac{3 \cdot 10^4}{16 r^4} \right) \cos 0 \right] = \frac{1}{2} \left(\frac{25}{r^2} - \frac{3 \cdot 10^4}{16 r^4} \right)$$

r	σ_{θ}/σ
5	-1.000
6	-0.376
7	-0.135
8	-0.034
9	0.011
10	0.031
11	0.039
12	0.042
13	0.041
14	0.039
15	0.037
16	0.035
17	0.032
18	0.030
19	0.027
20	0.025



3-50

$$D/d = \frac{1.5}{1} = 1.5$$

$$r/d = \frac{1/8}{1} = 0.125$$

Fig. A-15-8:

$$K_{ts} \doteq 1.39$$

Fig. A-15-9:

$$K_t \doteq 1.60$$

$$\sigma_A = K_t \frac{Mc}{I} = \frac{32K_t M}{\pi d^3} = \frac{32(1.6)(200)(14)}{\pi(1^3)} = 45\,630 \text{ psi}$$

$$\tau_A = K_{ts} \frac{Tc}{J} = \frac{16K_{ts} T}{\pi d^3} = \frac{16(1.39)(200)(15)}{\pi(1^3)} = 21\,240 \text{ psi}$$

$$\begin{aligned} \sigma_{\max} &= \frac{\sigma_A}{2} + \sqrt{\left(\frac{\sigma_A}{2}\right)^2 + \tau_A^2} = \frac{45.63}{2} + \sqrt{\left(\frac{45.63}{2}\right)^2 + 21.24^2} \\ &= 54.0 \text{ kpsi} \quad \text{Ans.} \end{aligned}$$

$$\tau_{\max} = \sqrt{\left(\frac{45.63}{2}\right)^2 + 21.24^2} = 31.2 \text{ kpsi} \quad \text{Ans.}$$

3-51 As shown in Fig. 3-32, the maximum stresses occur at the inside fiber where $r = r_i$. Therefore, from Eq. (3-50)

$$\begin{aligned}\sigma_{t,\max} &= \frac{r_i^2 p_i}{r_o^2 - r_i^2} \left(1 + \frac{r_o^2}{r_i^2} \right) \\ &= p_i \left(\frac{r_o^2 + r_i^2}{r_o^2 - r_i^2} \right) \quad \text{Ans.} \\ \sigma_{r,\max} &= \frac{r_i^2 p_i}{r_o^2 - r_i^2} \left(1 - \frac{r_o^2}{r_i^2} \right) = -p_i \quad \text{Ans.}\end{aligned}$$

3-52 If $p_i = 0$, Eq. (3-49) becomes

$$\begin{aligned}\sigma_t &= \frac{-p_o r_o^2 - r_i^2 r_o^2 p_o / r^2}{r_o^2 - r_i^2} \\ &= -\frac{p_o r_o^2}{r_o^2 - r_i^2} \left(1 + \frac{r_i^2}{r^2} \right)\end{aligned}$$

The maximum tangential stress occurs at $r = r_i$. So

$$\sigma_{t,\max} = -\frac{2p_o r_o^2}{r_o^2 - r_i^2} \quad \text{Ans.}$$

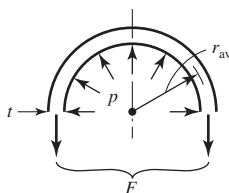
For σ_r , we have

$$\begin{aligned}\sigma_r &= \frac{-p_o r_o^2 + r_i^2 r_o^2 p_o / r^2}{r_o^2 - r_i^2} \\ &= \frac{p_o r_o^2}{r_o^2 - r_i^2} \left(\frac{r_i^2}{r^2} - 1 \right)\end{aligned}$$

So $\sigma_r = 0$ at $r = r_i$. Thus at $r = r_o$

$$\sigma_{r,\max} = \frac{p_o r_o^2}{r_o^2 - r_i^2} \left(\frac{r_i^2 - r_o^2}{r_o^2} \right) = -p_o \quad \text{Ans.}$$

3-53



$$F = pA = \pi r_{av}^2 p$$

$$\sigma_1 = \sigma_2 = \frac{F}{A_{\text{wall}}} = \frac{\pi r_{av}^2 p}{2\pi r_{av} t} = \frac{p r_{av}}{2t} \quad \text{Ans.}$$

3-54 $\sigma_t > \sigma_l > \sigma_r$

$\tau_{\max} = (\sigma_t - \sigma_r)/2$ at $r = r_i$ where σ_l is intermediate in value. From Prob. 4-50

$$\tau_{\max} = \frac{1}{2}(\sigma_{t, \max} - \sigma_{r, \max})$$

$$\tau_{\max} = \frac{p_i}{2} \left(\frac{r_o^2 + r_i^2}{r_o^2 - r_i^2} + 1 \right)$$

Now solve for p_i using $r_o = 75$ mm, $r_i = 69$ mm, and $\tau_{\max} = 25$ MPa. This gives $p_i = 3.84$ MPa *Ans.*

3-55 Given $r_o = 5$ in, $r_i = 4.625$ in and referring to the solution of Prob. 3-54,

$$\begin{aligned} \tau_{\max} &= \frac{350}{2} \left[\frac{(5)^2 + (4.625)^2}{(5)^2 - (4.625)^2} + 1 \right] \\ &= 2424 \text{ psi } \textit{Ans.} \end{aligned}$$

3-56 From Table A-20, $S_y = 57$ kpsi; also, $r_o = 0.875$ in and $r_i = 0.625$ in
From Prob. 3-52

$$\sigma_{t, \max} = -\frac{2p_o r_o^2}{r_o^2 - r_i^2}$$

Rearranging

$$p_o = \frac{(r_o^2 - r_i^2)(0.8S_y)}{2r_o^2}$$

Solving, gives $p_o = 11\,200$ psi *Ans.*

3-57 From Table A-20, $S_y = 390$ MPa; also $r_o = 25$ mm, $r_i = 20$ mm.

From Prob. 3-51

$$\sigma_{t, \max} = p_i \left(\frac{r_o^2 + r_i^2}{r_o^2 - r_i^2} \right) \quad \text{therefore} \quad p_i = 0.8S_y \left(\frac{r_o^2 - r_i^2}{r_o^2 + r_i^2} \right)$$

solving gives $p_i = 68.5$ MPa *Ans.*

3-58 Since σ_t and σ_r are both positive and $\sigma_t > \sigma_r$

$$\tau_{\max} = (\sigma_t)_{\max}/2$$

where σ_t is max at r_i

Eq. (3-55) for $r = r_i = 0.375$ in

$$(\sigma_t)_{\max} = \frac{0.282}{386} \left[\frac{2\pi(7200)}{60} \right]^2 \left(\frac{3 + 0.292}{8} \right) \\ \times \left[0.375^2 + 5^2 + \frac{(0.375^2)(5^2)}{0.375^2} - \frac{1 + 3(0.292)}{3 + 0.292} (0.375^2) \right] = 8556 \text{ psi}$$

$$\tau_{\max} = \frac{8556}{2} = 4278 \text{ psi} \quad \text{Ans.}$$

Radial stress:
$$\sigma_r = k \left(r_i^2 + r_o^2 - \frac{r_i^2 r_o^2}{r^2} - r^2 \right)$$

Maxima:
$$\frac{d\sigma_r}{dr} = k \left(2 \frac{r_i^2 r_o^2}{r^3} - 2r \right) = 0 \Rightarrow r = \sqrt{r_i r_o} = \sqrt{0.375(5)} = 1.3693 \text{ in}$$

$$(\sigma_r)_{\max} = \frac{0.282}{386} \left[\frac{2\pi(7200)}{60} \right]^2 \left(\frac{3 + 0.292}{8} \right) \left[0.375^2 + 5^2 - \frac{0.375^2(5^2)}{1.3693^2} - 1.3693^2 \right] \\ = 3656 \text{ psi} \quad \text{Ans.}$$

3-59

$$\omega = 2\pi(2069)/60 = 216.7 \text{ rad/s,}$$

$$\rho = 3320 \text{ kg/m}^3, \nu = 0.24, r_i = 0.0125 \text{ m}, r_o = 0.15 \text{ m;}$$

use Eq. (3-55)

$$\sigma_t = 3320(216.7)^2 \left(\frac{3 + 0.24}{8} \right) \left[(0.0125)^2 + (0.15)^2 + (0.15)^2 \right. \\ \left. - \frac{1 + 3(0.24)}{3 + 0.24} (0.0125)^2 \right] (10)^{-6} \\ = 2.85 \text{ MPa} \quad \text{Ans.}$$

3-60

$$\rho = \frac{(6/16)}{386(1/16)(\pi/4)(6^2 - 1^2)} \\ = 5.655(10^{-4}) \text{ lbf} \cdot \text{s}^2/\text{in}^4$$

τ_{\max} is at bore and equals $\frac{\sigma_t}{2}$

Eq. (3-55)

$$(\sigma_t)_{\max} = 5.655(10^{-4}) \left[\frac{2\pi(10\,000)}{60} \right]^2 \left(\frac{3 + 0.20}{8} \right) \left[0.5^2 + 3^2 + 3^2 - \frac{1 + 3(0.20)}{3 + 0.20} (0.5)^2 \right] \\ = 4496 \text{ psi}$$

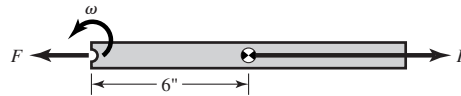
$$\tau_{\max} = \frac{4496}{2} = 2248 \text{ psi} \quad \text{Ans.}$$

3-61

$$\omega = 2\pi(3000)/60 = 314.2 \text{ rad/s}$$

$$m = \frac{0.282(1.25)(12)(0.125)}{386}$$

$$= 1.370(10^{-3}) \text{ lbf} \cdot \text{s}^2/\text{in}$$



$$F = m\omega^2 r = 1.370(10^{-3})(314.2^2)(6)$$

$$= 811.5 \text{ lbf}$$

$$A_{\text{nom}} = (1.25 - 0.5)(1/8) = 0.09375 \text{ in}^2$$

$$\sigma_{\text{nom}} = \frac{811.5}{0.09375} = 8656 \text{ psi} \quad \text{Ans.}$$

Note: Stress concentration Fig. A-15-1 gives $K_t \doteq 2.25$ which increases σ_{max} and fatigue.

3-62 to 3-67

$$\nu = 0.292, \quad E = 30 \text{ Mpsi (207 GPa)}, \quad r_i = 0$$

$$R = 0.75 \text{ in (20 mm)}, \quad r_o = 1.5 \text{ in (40 mm)}$$

Eq. (3-57)

$$p_{\text{psi}} = \frac{30(10^6)\delta}{0.75^3} \left[\frac{(1.5^2 - 0.75^2)(0.75^2 - 0)}{2(1.5^2 - 0)} \right] = 1.5(10^7)\delta \quad (1)$$

$$p_{\text{Pa}} = \frac{207(10^9)\delta}{0.020^3} \left[\frac{(0.04^2 - 0.02^2)(0.02^2 - 0)}{2(0.04^2 - 0)} \right] = 3.881(10^{12})\delta \quad (2)$$

3-62

$$\delta_{\text{max}} = \frac{1}{2}[40.042 - 40.000] = 0.021 \text{ mm} \quad \text{Ans.}$$

$$\delta_{\text{min}} = \frac{1}{2}[40.026 - 40.025] = 0.0005 \text{ mm} \quad \text{Ans.}$$

From (2)

$$p_{\text{max}} = 81.5 \text{ MPa}, \quad p_{\text{min}} = 1.94 \text{ MPa} \quad \text{Ans.}$$

3-63

$$\delta_{\text{max}} = \frac{1}{2}(1.5016 - 1.5000) = 0.0008 \text{ in} \quad \text{Ans.}$$

$$\delta_{\text{min}} = \frac{1}{2}(1.5010 - 1.5010) = 0 \quad \text{Ans.}$$

Eq. (1)

$$p_{\text{max}} = 12\,000 \text{ psi}, \quad p_{\text{min}} = 0 \quad \text{Ans.}$$

3-64

$$\delta_{\max} = \frac{1}{2}(40.059 - 40.000) = 0.0295 \text{ mm} \quad \text{Ans.}$$

$$\delta_{\min} = \frac{1}{2}(40.043 - 40.025) = 0.009 \text{ mm} \quad \text{Ans.}$$

Eq. (2)

$$p_{\max} = 114.5 \text{ MPa}, \quad p_{\min} = 34.9 \text{ MPa} \quad \text{Ans.}$$

3-65

$$\delta_{\max} = \frac{1}{2}(1.5023 - 1.5000) = 0.00115 \text{ in} \quad \text{Ans.}$$

$$\delta_{\min} = \frac{1}{2}(1.5017 - 1.5010) = 0.00035 \text{ in} \quad \text{Ans.}$$

Eq. (1)

$$p_{\max} = 17\,250 \text{ psi} \quad p_{\min} = 5\,250 \text{ psi} \quad \text{Ans.}$$

3-66

$$\delta_{\max} = \frac{1}{2}(40.076 - 40.000) = 0.038 \text{ mm} \quad \text{Ans.}$$

$$\delta_{\min} = \frac{1}{2}(40.060 - 40.025) = 0.0175 \text{ mm} \quad \text{Ans.}$$

Eq. (2)

$$p_{\max} = 147.5 \text{ MPa} \quad p_{\min} = 67.9 \text{ MPa} \quad \text{Ans.}$$

3-67

$$\delta_{\max} = \frac{1}{2}(1.5030 - 1.500) = 0.0015 \text{ in} \quad \text{Ans.}$$

$$\delta_{\min} = \frac{1}{2}(1.5024 - 1.5010) = 0.0007 \text{ in} \quad \text{Ans.}$$

Eq. (1)

$$p_{\max} = 22\,500 \text{ psi} \quad p_{\min} = 10\,500 \text{ psi} \quad \text{Ans.}$$

3-68

$$\delta = \frac{1}{2}(1.002 - 1.000) = 0.001 \text{ in} \quad r_i = 0, \quad R = 0.5 \text{ in}, \quad r_o = 1 \text{ in}$$

$$\nu = 0.292, \quad E = 30 \text{ Mpsi}$$

Eq. (3-57)

$$p = \frac{30(10^6)(0.001)}{0.5^3} \left[\frac{(1^2 - 0.5^2)(0.5^2 - 0)}{2(1^2 - 0)} \right] = 2.25(10^4) \text{ psi} \quad \text{Ans.}$$

Eq. (3-50) for outer member at $r_i = 0.5 \text{ in}$

$$(\sigma_i)_o = \frac{0.5^2(2.25)(10^4)}{1^2 - 0.5^2} \left(1 + \frac{1^2}{0.5^2} \right) = 37\,500 \text{ psi} \quad \text{Ans.}$$

Inner member, from Prob. 3-52

$$(\sigma_t)_i = -\frac{p_o r_o^2}{r_o^2 - r_i^2} \left(1 + \frac{r_i^2}{r_o^2}\right) = -\frac{2.25(10^4)(0.5^2)}{0.5^2 - 0} \left(1 + \frac{0}{0.5^2}\right) = -22\,500 \text{ psi} \quad \text{Ans.}$$

3-69

$$v_i = 0.292, \quad E_i = 30(10^6) \text{ psi}, \quad v_o = 0.211, \quad E_o = 14.5(10^6) \text{ psi}$$

$$\delta = \frac{1}{2}(1.002 - 1.000) = 0.001 \text{ in}, \quad r_i = 0, \quad R = 0.5, \quad r_o = 1$$

Eq. (3-56)

$$0.001 = \left[\frac{0.5}{14.5(10^6)} \left(\frac{1^2 + 0.5^2}{1^2 - 0.5^2} + 0.211 \right) + \frac{0.5}{30(10^6)} \left(\frac{0.5^2 + 0}{0.5^2 - 0} - 0.292 \right) \right] p$$

$$p = 13\,064 \text{ psi} \quad \text{Ans.}$$

Eq. (3-50) for outer member at $r_i = 0.5$ in

$$(\sigma_t)_o = \frac{0.5^2(13\,064)}{1^2 - 0.5^2} \left(1 + \frac{1^2}{0.5^2}\right) = 21\,770 \text{ psi} \quad \text{Ans.}$$

Inner member, from Prob. 3-52

$$(\sigma_t)_i = -\frac{13\,064(0.5^2)}{0.5^2 - 0} \left(1 + \frac{0}{0.5^2}\right) = -13\,064 \text{ psi} \quad \text{Ans.}$$

3-70

$$\delta_{\max} = \frac{1}{2}(1.003 - 1.000) = 0.0015 \text{ in} \quad r_i = 0, \quad R = 0.5 \text{ in}, \quad r_o = 1 \text{ in}$$

$$\delta_{\min} = \frac{1}{2}(1.002 - 1.001) = 0.0005 \text{ in}$$

Eq. (3-57)

$$p_{\max} = \frac{30(10^6)(0.0015)}{0.5^3} \left[\frac{(1^2 - 0.5^2)(0.5^2 - 0)}{2(1^2 - 0)} \right] = 33\,750 \text{ psi} \quad \text{Ans.}$$

Eq. (3-50) for outer member at $r = 0.5$ in

$$(\sigma_t)_o = \frac{0.5^2(33\,750)}{1^2 - 0.5^2} \left(1 + \frac{1^2}{0.5^2}\right) = 56\,250 \text{ psi} \quad \text{Ans.}$$

For inner member, from Prob. 3-52, with $r = 0.5$ in

$$(\sigma_t)_i = -33\,750 \text{ psi} \quad \text{Ans.}$$

For δ_{\min} all answers are $0.0005/0.0015 = 1/3$ of above answers *Ans.*

3-71

$$\nu_i = 0.292, \quad E_i = 30 \text{ Mpsi}, \quad \nu_o = 0.334, \quad E_o = 10.4 \text{ Mpsi}$$

$$\delta_{\max} = \frac{1}{2}(2.005 - 2.000) = 0.0025 \text{ in}$$

$$\delta_{\min} = \frac{1}{2}(2.003 - 2.002) = 0.0005 \text{ in}$$

$$0.0025 = \left[\frac{1.0}{10.4(10^6)} \left(\frac{2^2 + 1^2}{2^2 - 1^2} + 0.334 \right) + \frac{1.0}{30(10^6)} \left(\frac{1^2 + 0}{1^2 - 0} - 0.292 \right) \right] p_{\max}$$

$$p_{\max} = 11\,576 \text{ psi} \quad \text{Ans.}$$

Eq. (3-50) for outer member at $r = 1$ in

$$(\sigma_t)_o = \frac{1^2(11\,576)}{2^2 - 1^2} \left(1 + \frac{2^2}{1^2} \right) = 19\,293 \text{ psi} \quad \text{Ans.}$$

Inner member from Prob. 3-52 with $r = 1$ in

$$(\sigma_t)_i = -11\,576 \text{ psi} \quad \text{Ans.}$$

For δ_{\min} all above answers are $0.0005/0.0025 = 1/5$ Ans.

3-72

(a) Axial resistance

Normal force at fit interface

$$N = pA = p(2\pi Rl) = 2\pi pRl$$

Fully-developed friction force

$$F_{ax} = fN = 2\pi fpRl \quad \text{Ans.}$$

(b) Torsional resistance at fully developed friction is

$$T = fRN = 2\pi fpR^2l \quad \text{Ans.}$$

3-73 $d = 1$ in, $r_i = 1.5$ in, $r_o = 2.5$ in.

From Table 3-4, for $R = 0.5$ in,

$$r_c = 1.5 + 0.5 = 2 \text{ in}$$

$$r_n = \frac{0.5^2}{2(2 - \sqrt{2^2 - 0.5^2})} = 1.968\,245\,8 \text{ in}$$

$$e = r_c - r_n = 2.0 - 1.968\,245\,8 = 0.031\,754 \text{ in}$$

$$c_i = r_n - r_i = 1.9682 - 1.5 = 0.4682 \text{ in}$$

$$c_o = r_o - r_n = 2.5 - 1.9682 = 0.5318 \text{ in}$$

$$A = \pi d^2/4 = \pi(1)^2/4 = 0.7854 \text{ in}^2$$

$$M = Fr_c = 1000(2) = 2000 \text{ lbf} \cdot \text{in}$$

Using Eq. (3-65)

$$\sigma_i = \frac{F}{A} + \frac{Mc_i}{Aer_i} = \frac{1000}{0.7854} + \frac{2000(0.4682)}{0.7854(0.031754)(1.5)} = 26\,300 \text{ psi} \quad \text{Ans.}$$

$$\sigma_o = \frac{F}{A} - \frac{Mc_o}{Aer_o} = \frac{1000}{0.7854} - \frac{2000(0.5318)}{0.7854(0.031754)(2.5)} = -15\,800 \text{ psi} \quad \text{Ans.}$$

3-74 Section AA:

$$D = 0.75 \text{ in}, r_i = 0.75/2 = 0.375 \text{ in}, r_o = 0.75/2 + 0.25 = 0.625 \text{ in}$$

From Table 3-4, for $R = 0.125 \text{ in}$,

$$r_c = (0.75 + 0.25)/2 = 0.500 \text{ in}$$

$$r_n = \frac{0.125^2}{2(0.5 - \sqrt{0.5^2 - 0.125^2})} = 0.492\,061\,5 \text{ in}$$

$$e = 0.5 - r_n = 0.007\,939 \text{ in}$$

$$c_o = r_o - r_n = 0.625 - 0.492\,06 = 0.132\,94 \text{ in}$$

$$c_i = r_n - r_i = 0.492\,06 - 0.375 = 0.117\,06 \text{ in}$$

$$A = \pi(0.25)^2/4 = 0.049\,087$$

$$M = Fr_c = 100(0.5) = 50 \text{ lbf} \cdot \text{in}$$

$$\sigma_i = \frac{100}{0.049\,09} + \frac{50(0.117\,06)}{0.049\,09(0.007\,939)(0.375)} = 42\,100 \text{ psi} \quad \text{Ans.}$$

$$\sigma_o = \frac{100}{0.049\,09} - \frac{50(0.132\,94)}{0.049\,09(0.007\,939)(0.625)} = -25\,250 \text{ psi} \quad \text{Ans.}$$

Section BB: Abscissa angle θ of line of radius centers is

$$\begin{aligned} \theta &= \cos^{-1} \left(\frac{r_2 + d/2}{r_2 + d + D/2} \right) \\ &= \cos^{-1} \left(\frac{0.375 + 0.25/2}{0.375 + 0.25 + 0.75/2} \right) = 60^\circ \end{aligned}$$

$$M = F \frac{D + d}{2} \cos \theta = 100(0.5) \cos 60^\circ = 25 \text{ lbf} \cdot \text{in}$$

$$r_i = r_2 = 0.375 \text{ in}$$

$$r_o = r_2 + d = 0.375 + 0.25 = 0.625 \text{ in}$$

$$e = 0.007\,939 \text{ in} \quad (\text{as before})$$

$$\begin{aligned} \sigma_i &= \frac{F \cos \theta}{A} - \frac{Mc_i}{Aer_i} \\ &= \frac{100 \cos 60^\circ}{0.049\,09} - \frac{25(0.117\,06)}{0.049\,09(0.007\,939)(0.375)} = -19\,000 \text{ psi} \quad \text{Ans.} \end{aligned}$$

$$\sigma_o = \frac{100 \cos 60^\circ}{0.049\,09} + \frac{25(0.132\,94)}{0.049\,09(0.007\,939)(0.625)} = 14\,700 \text{ psi} \quad \text{Ans.}$$

On section BB, the shear stress due to the shear force is zero at the surface.

3-75 $r_i = 0.125$ in, $r_o = 0.125 + 0.1094 = 0.2344$ in

From Table 3-4 for $h = 0.1094$

$$r_c = 0.125 + 0.1094/2 = 0.1797 \text{ in}$$

$$r_n = 0.1094/\ln(0.2344/0.125) = 0.174006 \text{ in}$$

$$e = r_c - r_n = 0.1797 - 0.174006 = 0.005694 \text{ in}$$

$$c_i = r_n - r_i = 0.174006 - 0.125 = 0.049006 \text{ in}$$

$$c_o = r_o - r_n = 0.2344 - 0.174006 = 0.060394 \text{ in}$$

$$A = 0.75(0.1094) = 0.082050 \text{ in}^2$$

$$M = F(4 + h/2) = 3(4 + 0.1094/2) = 12.16 \text{ lbf} \cdot \text{in}$$

$$\sigma_i = -\frac{3}{0.08205} - \frac{12.16(0.0490)}{0.08205(0.005694)(0.125)} = -10240 \text{ psi} \quad \text{Ans.}$$

$$\sigma_o = -\frac{3}{0.08205} + \frac{12.16(0.0604)}{0.08205(0.005694)(0.2344)} = 6670 \text{ psi} \quad \text{Ans.}$$

3-76 Find the resultant of \mathbf{F}_1 and \mathbf{F}_2 .

$$F_x = F_{1x} + F_{2x} = 250 \cos 60^\circ + 333 \cos 0^\circ \\ = 458 \text{ lbf}$$

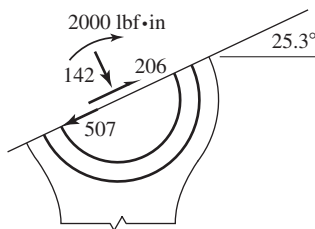
$$F_y = F_{1y} + F_{2y} = 250 \sin 60^\circ + 333 \sin 0^\circ \\ = 216.5 \text{ lbf}$$

$$F = (458^2 + 216.5^2)^{1/2} = 506.6 \text{ lbf}$$

This is the pin force on the lever which acts in a direction

$$\theta = \tan^{-1} \frac{F_y}{F_x} = \tan^{-1} \frac{216.5}{458} = 25.3^\circ$$

On the 25.3° surface from \mathbf{F}_1



$$F_t = 250 \cos(60^\circ - 25.3^\circ) = 206 \text{ lbf}$$

$$F_n = 250 \sin(60^\circ - 25.3^\circ) = 142 \text{ lbf}$$

$$r_c = 1 + 3.5/2 = 2.75 \text{ in}$$

$$A = 2[0.8125(0.375) + 1.25(0.375)] \\ = 1.546875 \text{ in}^2$$

The denominator of Eq. (3-63), given below, has four additive parts.

$$r_n = \frac{A}{\int (dA/r)}$$

For $\int dA/r$, add the results of the following equation for each of the four rectangles.

$$\int_{r_i}^{r_o} \frac{bdr}{r} = b \ln \frac{r_o}{r_i}, \quad b = \text{width}$$

$$\int \frac{dA}{r} = 0.375 \ln \frac{1.8125}{1} + 1.25 \ln \frac{2.1875}{1.8125} + 1.25 \ln \frac{3.6875}{3.3125} + 0.375 \ln \frac{4.5}{3.6875}$$

$$= 0.6668106$$

$$r_n = \frac{1.546875}{0.6668106} = 2.3198 \text{ in}$$

$$e = r_c - r_n = 2.75 - 2.3198 = 0.4302 \text{ in}$$

$$c_i = r_n - r_i = 2.320 - 1 = 1.320 \text{ in}$$

$$c_o = r_o - r_n = 4.5 - 2.320 = 2.180 \text{ in}$$

Shear stress due to 206 lbf force is zero at inner and outer surfaces.

$$\sigma_i = -\frac{142}{1.547} + \frac{2000(1.32)}{1.547(0.4302)(1)} = 3875 \text{ psi} \quad \text{Ans.}$$

$$\sigma_o = -\frac{142}{1.547} - \frac{2000(2.18)}{1.547(0.4302)(4.5)} = -1548 \text{ psi} \quad \text{Ans.}$$

3-77

$$A = (6 - 2 - 1)(0.75) = 2.25 \text{ in}^2$$

$$r_c = \frac{6 + 2}{2} = 4 \text{ in}$$

Similar to Prob. 3-76,

$$\int \frac{dA}{r} = 0.75 \ln \frac{3.5}{2} + 0.75 \ln \frac{6}{4.5} = 0.6354734 \text{ in}$$

$$r_n = \frac{A}{\int (dA/r)} = \frac{2.25}{0.6354734} = 3.5407 \text{ in}$$

$$e = 4 - 3.5407 = 0.4593 \text{ in}$$

$$\sigma_i = \frac{5000}{2.25} + \frac{20000(3.5407 - 2)}{2.25(0.4593)(2)} = 17130 \text{ psi} \quad \text{Ans.}$$

$$\sigma_o = \frac{5000}{2.25} - \frac{20000(6 - 3.5407)}{2.25(0.4593)(6)} = -5710 \text{ psi} \quad \text{Ans.}$$

3-78

$$A = \int_{r_i}^{r_o} b dr = \int_2^6 \frac{2}{r} dr = 2 \ln \frac{6}{2}$$

$$= 2.197225 \text{ in}^2$$

$$\begin{aligned}
 r_c &= \frac{1}{A} \int_{r_i}^{r_o} br \, dr = \frac{1}{2.197225} \int_2^6 \frac{2r}{r} \, dr \\
 &= \frac{2}{2.197225} (6 - 2) = 3.640957 \text{ in} \\
 r_n &= \frac{A}{\int_{r_i}^{r_o} (b/r) \, dr} = \frac{2.197225}{\int_2^6 (2/r^2) \, dr} \\
 &= \frac{2.197225}{2[1/2 - 1/6]} = 3.295837 \text{ in} \\
 e &= R - r_n = 3.640957 - 3.295837 = 0.34512 \\
 c_i &= r_n - r_i = 3.2958 - 2 = 1.2958 \text{ in} \\
 c_o &= r_o - r_n = 6 - 3.2958 = 2.7042 \text{ in} \\
 \sigma_i &= \frac{20000}{2.197} + \frac{20000(3.641)(1.2958)}{2.197(0.34512)(2)} = 71330 \text{ psi} \quad \text{Ans.} \\
 \sigma_o &= \frac{20000}{2.197} - \frac{20000(3.641)(2.7042)}{2.197(0.34512)(6)} = -34180 \text{ psi} \quad \text{Ans.}
 \end{aligned}$$

3-79 $r_c = 12 \text{ in}$, $M = 20(2 + 2) = 80 \text{ kip} \cdot \text{in}$

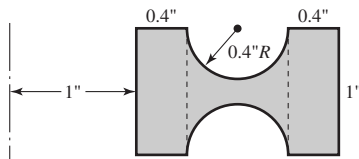
From statics book, $I = \frac{\pi}{4} a^3 b = \frac{\pi}{4} (2^3) 1 = 2\pi \text{ in}^4$

Inside: $\sigma_i = \frac{F}{A} + \frac{My r_c}{I r_i} = \frac{20}{2\pi} + \frac{80(2) 12}{2\pi \cdot 10} = 33.7 \text{ kpsi} \quad \text{Ans.}$

Outside: $\sigma_o = \frac{F}{A} - \frac{My r_c}{I r_o} = \frac{20}{2\pi} - \frac{80(2) 12}{2\pi \cdot 14} = -18.6 \text{ kpsi} \quad \text{Ans.}$

Note: A much more accurate solution (see the 7th edition) yields $\sigma_i = 32.25 \text{ kpsi}$ and $\sigma_o = -19.40 \text{ kpsi}$

3-80



For rectangle, $\int \frac{dA}{r} = b \ln r_o/r_i$

For circle, $\frac{A}{\int (dA/r)} = \frac{r^2}{2(r_c - \sqrt{r_c^2 - r^2})}$, $A_o = \pi r^2$

$$\therefore \int \frac{dA}{r} = 2\pi \left(r_c - \sqrt{r_c^2 - r^2} \right)$$

$$\sum \int \frac{dA}{r} = 1 \ln \frac{2.6}{1} - 2\pi \left(1.8 - \sqrt{1.8^2 - 0.4^2}\right) = 0.6727234$$

$$A = 1(1.6) - \pi(0.4^2) = 1.0973452 \text{ in}^2$$

$$r_n = \frac{1.0973452}{0.6727234} = 1.6312 \text{ in}$$

$$e = 1.8 - r_n = 0.1688 \text{ in}$$

$$c_i = 1.6312 - 1 = 0.6312 \text{ in}$$

$$c_o = 2.6 - 1.6312 = 0.9688 \text{ in}$$

$$M = 3000(5.8) = 17400 \text{ lbf} \cdot \text{in}$$

$$\sigma_i = \frac{3}{1.0973} + \frac{17.4(0.6312)}{1.0973(0.1688)(1)} = 62.03 \text{ kpsi} \quad \text{Ans.}$$

$$\sigma_o = \frac{3}{1.0973} - \frac{17.4(0.9688)}{1.0973(0.1688)(2.6)} = -32.27 \text{ kpsi} \quad \text{Ans.}$$

3-81 From Eq. (3-68)

$$a = KF^{1/3} = F^{1/3} \left\{ \frac{3}{8} \frac{2[(1-\nu^2)/E]}{2(1/d)} \right\}^{1/3}$$

Use $\nu = 0.292$, F in newtons, E in N/mm^2 and d in mm, then

$$K = \left\{ \frac{3}{8} \frac{[(1-0.292^2)/207000]}{1/25} \right\}^{1/3} = 0.0346$$

$$\begin{aligned} p_{\max} &= \frac{3F}{2\pi a^2} = \frac{3F}{2\pi(KF^{1/3})^2} \\ &= \frac{3F^{1/3}}{2\pi K^2} = \frac{3F^{1/3}}{2\pi(0.0346)^2} \\ &= 399F^{1/3} \text{ MPa} = |\sigma_{\max}| \quad \text{Ans.} \end{aligned}$$

$$\begin{aligned} \tau_{\max} &= 0.3p_{\max} \\ &= 120F^{1/3} \text{ MPa} \quad \text{Ans.} \end{aligned}$$

3-82 From Prob. 3-81,

$$K = \left\{ \frac{3}{8} \frac{2[(1-0.292^2)/207000]}{1/25+0} \right\}^{1/3} = 0.0436$$

$$p_{\max} = \frac{3F^{1/3}}{2\pi K^2} = \frac{3F^{1/3}}{2\pi(0.0436)^2} = 251F^{1/3}$$

and so, $\sigma_z = -251F^{1/3} \text{ MPa} \quad \text{Ans.}$

$$\tau_{\max} = 0.3(251)F^{1/3} = 75.3F^{1/3} \text{ MPa} \quad \text{Ans.}$$

$$z = 0.48a = 0.48(0.0436)18^{1/3} = 0.055 \text{ mm} \quad \text{Ans.}$$

3-83 $\nu_1 = 0.334$, $E_1 = 10.4$ Mpsi, $l = 2$ in, $d_1 = 1$ in, $\nu_2 = 0.211$, $E_2 = 14.5$ Mpsi, $d_2 = -8$ in.

With $b = K_c F^{1/2}$, from Eq. (3-73),

$$K_c = \left(\frac{2}{\pi(2)} \frac{(1 - 0.334^2)/[10.4(10^6)] + (1 - 0.211^2)/[14.5(10^6)]}{1 - 0.125} \right)^{1/2}$$

$$= 0.000\,234\,6$$

Be sure to check σ_x for both ν_1 and ν_2 . Shear stress is maximum in the aluminum roller. So,

$$\tau_{\max} = 0.3 p_{\max}$$

$$p_{\max} = \frac{4000}{0.3} = 13\,300 \text{ psi}$$

Since $p_{\max} = 2F/(\pi b l)$ we have

$$p_{\max} = \frac{2F}{\pi l K_c F^{1/2}} = \frac{2F^{1/2}}{\pi l K_c}$$

So,

$$F = \left(\frac{\pi l K_c p_{\max}}{2} \right)^2$$

$$= \left(\frac{\pi(2)(0.000\,234\,6)(13\,300)}{2} \right)^2$$

$$= 96.1 \text{ lbf} \quad \text{Ans.}$$

3-84 Good class problem

3-85 From Table A-5, $\nu = 0.211$

$$\frac{\sigma_x}{p_{\max}} = (1 + \nu) - \frac{1}{2} = (1 + 0.211) - \frac{1}{2} = 0.711$$

$$\frac{\sigma_y}{p_{\max}} = 0.711$$

$$\frac{\sigma_z}{p_{\max}} = 1$$

These are principal stresses

$$\frac{\tau_{\max}}{p_{\max}} = \frac{1}{2}(\sigma_1 - \sigma_3) = \frac{1}{2}(1 - 0.711) = 0.1445$$

3-86 From Table A-5: $\nu_1 = 0.211$, $\nu_2 = 0.292$, $E_1 = 14.5(10^6)$ psi, $E_2 = 30(10^6)$ psi, $d_1 = 6$ in, $d_2 = \infty$, $l = 2$ in

$$\text{(a) Eq. (3-73): } b = \sqrt{\frac{2(800)}{\pi(2)} \frac{(1 - 0.211^2)/14.5(10^6) + (1 - 0.292^2)/[30(10^6)]}{1/6 + 1/\infty}}$$

$$= 0.012\,135 \text{ in}$$

$$p_{\max} = \frac{2(800)}{\pi(0.012\,135)(2)} = 20\,984 \text{ psi}$$

For $z = 0$ in,

$$\sigma_{x1} = -2\nu_1 p_{\max} = -2(0.211)20\,984 = -8855 \text{ psi in wheel}$$

$$\sigma_{x2} = -2(0.292)20\,984 = -12\,254 \text{ psi}$$

In plate

$$\sigma_y = -p_{\max} = -20\,984 \text{ psi}$$

$$\sigma_z = -20\,984 \text{ psi}$$

These are principal stresses.

(b) For $z = 0.010$ in,

$$\sigma_{x1} = -4177 \text{ psi in wheel}$$

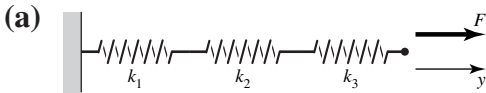
$$\sigma_{x2} = -5781 \text{ psi in plate}$$

$$\sigma_y = -3604 \text{ psi}$$

$$\sigma_z = -16\,194 \text{ psi}$$

Chapter 4

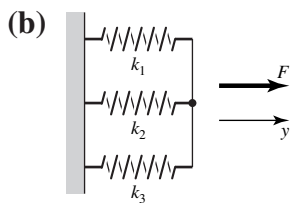
4-1



$$k = \frac{F}{y}; \quad y = \frac{F}{k_1} + \frac{F}{k_2} + \frac{F}{k_3}$$

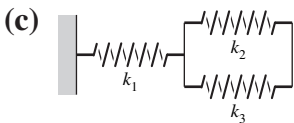
so

$$k = \frac{1}{(1/k_1) + (1/k_2) + (1/k_3)} \quad \text{Ans.}$$



$$F = k_1 y + k_2 y + k_3 y$$

$$k = F/y = k_1 + k_2 + k_3 \quad \text{Ans.}$$



$$\frac{1}{k} = \frac{1}{k_1} + \frac{1}{k_2 + k_3} \quad k = \left(\frac{1}{k_1} + \frac{1}{k_2 + k_3} \right)^{-1}$$

4-2 For a torsion bar, $k_T = T/\theta = Fl/\theta$, and so $\theta = Fl/k_T$. For a cantilever, $k_C = F/\delta$, $\delta = F/k_C$. For the assembly, $k = F/y$, $y = F/k = l\theta + \delta$

So
$$y = \frac{F}{k} = \frac{Fl^2}{k_T} + \frac{F}{k_C}$$

Or
$$k = \frac{1}{(l^2/k_T) + (1/k_C)} \quad \text{Ans.}$$

4-3 For a torsion bar, $k = T/\theta = GJ/l$ where $J = \pi d^4/32$. So $k = \pi d^4 G/(32l) = Kd^4/l$. The springs, 1 and 2, are in parallel so

$$k = k_1 + k_2 = K \frac{d^4}{l_1} + K \frac{d^4}{l_2}$$

$$= Kd^4 \left(\frac{1}{x} + \frac{1}{l-x} \right)$$

And
$$\theta = \frac{T}{k} = \frac{T}{Kd^4 \left(\frac{1}{x} + \frac{1}{l-x} \right)}$$

Then
$$T = k\theta = \frac{Kd^4}{x} \theta + \frac{Kd^4}{l-x} \theta$$

Thus
$$T_1 = \frac{Kd^4}{x}\theta; \quad T_2 = \frac{Kd^4\theta}{l-x}$$

If $x = l/2$, then $T_1 = T_2$. If $x < l/2$, then $T_1 > T_2$

Using $\tau = 16T/\pi d^3$ and $\theta = 32Tl/(G\pi d^4)$ gives

$$T = \frac{\pi d^3 \tau}{16}$$

and so

$$\theta_{\text{all}} = \frac{32l}{G\pi d^4} \cdot \frac{\pi d^3 \tau}{16} = \frac{2l\tau_{\text{all}}}{Gd}$$

Thus, if $x < l/2$, the allowable twist is

$$\theta_{\text{all}} = \frac{2x\tau_{\text{all}}}{Gd} \quad \text{Ans.}$$

Since

$$\begin{aligned} k &= Kd^4 \left(\frac{1}{x} + \frac{1}{l-x} \right) \\ &= \frac{\pi Gd^4}{32} \left(\frac{1}{x} + \frac{1}{l-x} \right) \quad \text{Ans.} \end{aligned}$$

Then the maximum torque is found to be

$$T_{\text{max}} = \frac{\pi d^3 x \tau_{\text{all}}}{16} \left(\frac{1}{x} + \frac{1}{l-x} \right) \quad \text{Ans.}$$

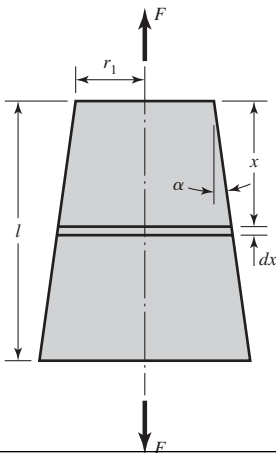
4-4 Both legs have the same twist angle. From Prob. 4-3, for equal shear, d is linear in x . Thus, $d_1 = 0.2d_2$ Ans.

$$k = \frac{\pi G}{32} \left[\frac{(0.2d_2)^4}{0.2l} + \frac{d_2^4}{0.8l} \right] = \frac{\pi G}{32l} (1.258d_2^4) \quad \text{Ans.}$$

$$\theta_{\text{all}} = \frac{2(0.8l)\tau_{\text{all}}}{Gd_2} \quad \text{Ans.}$$

$$T_{\text{max}} = k\theta_{\text{all}} = 0.198d_2^3\tau_{\text{all}} \quad \text{Ans.}$$

4-5



$$A = \pi r^2 = \pi(r_1 + x \tan \alpha)^2$$

$$d\delta = \frac{Fdx}{AE} = \frac{Fdx}{E\pi(r_1 + x \tan \alpha)^2}$$

$$\delta = \frac{F}{\pi E} \int_0^l \frac{dx}{(r_1 + x \tan \alpha)^2}$$

$$= \frac{F}{\pi E} \left(-\frac{1}{\tan \alpha (r_1 + x \tan \alpha)} \right)_0^l$$

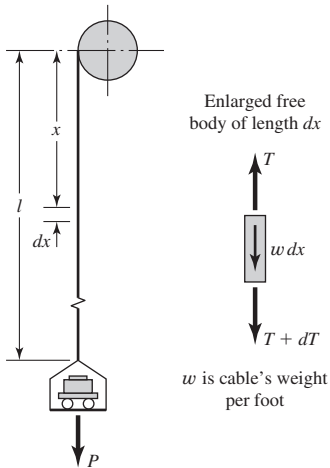
$$= \frac{F}{\pi E} \frac{1}{r_1(r_1 + l \tan \alpha)}$$

Then

$$k = \frac{F}{\delta} = \frac{\pi E r_1 (r_1 + l \tan \alpha)}{l}$$

$$= \frac{EA_1}{l} \left(1 + \frac{2l}{d_1} \tan \alpha \right) \quad \text{Ans.}$$

4-6



$$\sum F = (T + dT) + w dx - T = 0$$

$$\frac{dT}{dx} = -w$$

Solution is $T = -wx + c$

$$T|_{x=0} = P + wl = c$$

$$T = -wx + P + wl$$

$$T = P + w(l - x)$$

The infinitesimal stretch of the free body of original length dx is

$$d\delta = \frac{T dx}{AE}$$

$$= \frac{P + w(l - x)}{AE} dx$$

Integrating,

$$\delta = \int_0^l \frac{[P + w(l - x)] dx}{AE}$$

$$\delta = \frac{Pl}{AE} + \frac{wl^2}{2AE} \quad \text{Ans.}$$

4-7

$$M = wx - \frac{wl^2}{2} - \frac{wx^2}{2}$$

$$EI \frac{dy}{dx} = \frac{wlx^2}{2} - \frac{wl^2}{2}x - \frac{wx^3}{6} + C_1, \quad \frac{dy}{dx} = 0 \text{ at } x = 0, \quad \therefore C_1 = 0$$

$$EI y = \frac{wlx^3}{6} - \frac{wl^2x^2}{4} - \frac{wx^4}{24} + C_2, \quad y = 0 \text{ at } x = 0, \quad \therefore C_2 = 0$$

$$y = \frac{wx^2}{24EI} (4lx - 6l^2 - x^2) \quad \text{Ans.}$$

4-8

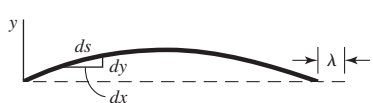
$$M = M_1 = M_B$$

$$EI \frac{dy}{dx} = M_B x + C_1, \quad \frac{dy}{dx} = 0 \text{ at } x = 0, \quad \therefore C_1 = 0$$

$$EI y = \frac{M_B x^2}{2} + C_2, \quad y = 0 \text{ at } x = 0, \quad \therefore C_2 = 0$$

$$y = \frac{M_B x^2}{2EI} \quad \text{Ans.}$$

4-9



$$ds = \sqrt{dx^2 + dy^2} = dx \sqrt{1 + \left(\frac{dy}{dx}\right)^2}$$

Expand right-hand term by Binomial theorem

$$\left[1 + \left(\frac{dy}{dx}\right)^2\right]^{1/2} = 1 + \frac{1}{2} \left(\frac{dy}{dx}\right)^2 + \dots$$

Since dy/dx is small compared to 1, use only the first two terms,

$$\begin{aligned} d\lambda &= ds - dx \\ &= dx \left[1 + \frac{1}{2} \left(\frac{dy}{dx}\right)^2\right] - dx \\ &= \frac{1}{2} \left(\frac{dy}{dx}\right)^2 dx \\ \therefore \lambda &= \frac{1}{2} \int_0^l \left(\frac{dy}{dx}\right)^2 dx \quad \text{Ans.} \end{aligned}$$

This contraction becomes important in a nonlinear, non-breaking extension spring.

$$4-10 \quad y = Cx^2(4lx - x^2 - 6l^2) \quad \text{where } C = \frac{w}{24EI}$$

$$\frac{dy}{dx} = Cx(12lx - 4x^2 - 12l^2) = 4Cx(3lx - x^2 - 3l^2)$$

$$\left(\frac{dy}{dx}\right)^2 = 16C^2(15l^2x^4 - 6lx^5 - 18x^3l^3 + x^6 + 9l^4x^2)$$

$$\lambda = \frac{1}{2} \int_0^l \left(\frac{dy}{dx}\right)^2 dx = 8C^2 \int_0^l (15l^2x^4 - 6lx^5 - 18x^3l^3 + x^6 + 9l^4x^2) dx$$

$$= 8C^2 \left(\frac{9}{14}l^7\right) = 8 \left(\frac{w}{24EI}\right)^2 \left(\frac{9}{14}l^7\right) = \frac{1}{112} \left(\frac{w}{EI}\right)^2 l^7 \quad \text{Ans.}$$

4-11 $y = Cx(2lx^2 - x^3 - l^3)$ where $C = \frac{w}{24EI}$

$$\frac{dy}{dx} = C(6lx^2 - 4x^3 - l^3)$$

$$\left(\frac{dy}{dx}\right)^2 = C^2(36l^2x^4 - 48lx^5 - 12l^4x^2 + 16x^6 + 8x^3l^3 + l^6)$$

$$\lambda = \frac{1}{2} \int_0^l \left(\frac{dy}{dx}\right)^2 dx = \frac{1}{2} C^2 \int_0^l (36l^2x^4 - 48lx^5 - 12l^4x^2 + 16x^6 + 8x^3l^3 + l^6) dx$$

$$= C^2 \left(\frac{17}{70}l^7\right) = \left(\frac{w}{24EI}\right)^2 \left(\frac{17}{70}l^7\right) = \frac{17}{40320} \left(\frac{w}{EI}\right)^2 l^7 \quad \text{Ans.}$$

4-12

$$I = 2(5.56) = 11.12 \text{ in}^4$$

$$y_{\max} = y_1 + y_2 = -\frac{wl^4}{8EI} + \frac{Fa^2}{6EI}(a - 3l)$$

Here $w = 50/12 = 4.167 \text{ lbf/in}$, and $a = 7(12) = 84 \text{ in}$, and $l = 10(12) = 120 \text{ in}$.

$$y_1 = -\frac{4.167(120)^4}{8(30)(10^6)(11.12)} = -0.324 \text{ in}$$

$$y_2 = -\frac{600(84)^2[3(120) - 84]}{6(30)(10^6)(11.12)} = -0.584 \text{ in}$$

So $y_{\max} = -0.324 - 0.584 = -0.908 \text{ in}$ *Ans.*

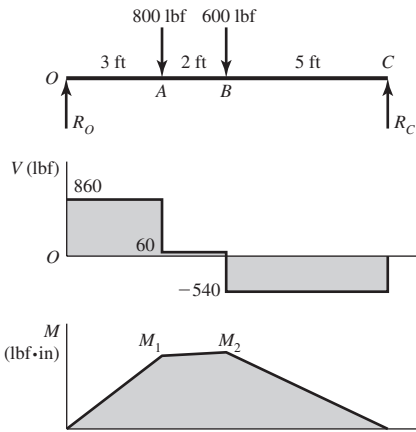
$$\begin{aligned} M_0 &= -Fa - (wl^2/2) \\ &= -600(84) - [4.167(120)^2/2] \\ &= -80400 \text{ lbf} \cdot \text{in} \end{aligned}$$

$$c = 4 - 1.18 = 2.82 \text{ in}$$

$$\begin{aligned} \sigma_{\max} &= \frac{-My}{I} = -\frac{(-80400)(-2.82)}{11.12} (10^{-3}) \\ &= -20.4 \text{ kpsi} \quad \text{Ans.} \end{aligned}$$

σ_{\max} is at the bottom of the section.

4-13



$$R_O = \frac{7}{10}(800) + \frac{5}{10}(600) = 860 \text{ lbf}$$

$$R_C = \frac{3}{10}(800) + \frac{5}{10}(600) = 540 \text{ lbf}$$

$$M_1 = 860(3)(12) = 30.96(10^3) \text{ lbf} \cdot \text{in}$$

$$M_2 = 30.96(10^3) + 60(2)(12) \\ = 32.40(10^3) \text{ lbf} \cdot \text{in}$$

$$\sigma_{\max} = \frac{M_{\max}}{Z} \Rightarrow 6 = \frac{32.40}{Z} \quad Z = 5.4 \text{ in}^3$$

$$y|_{x=5\text{ft}} = \frac{F_1 a [l - (l/2)]}{6EI} \left[\left(\frac{l}{2} \right)^2 + a^2 - 2l \frac{l}{2} \right] - \frac{F_2 l^3}{48EI}$$

$$-\frac{1}{16} = \frac{800(36)(60)}{6(30)(10^6)I(120)} [60^2 + 36^2 - 120^2] - \frac{600(120^3)}{48(30)(10^6)I}$$

$$I = 23.69 \text{ in}^4 \Rightarrow I/2 = 11.84 \text{ in}^4$$

Select two 6 in-8.2 lbf/ft channels; from Table A-7, $I = 2(13.1) = 26.2 \text{ in}^4$, $Z = 2(4.38) \text{ in}^3$

$$y_{\max} = \frac{23.69}{26.2} \left(-\frac{1}{16} \right) = -0.0565 \text{ in}$$

$$\sigma_{\max} = \frac{32.40}{2(4.38)} = 3.70 \text{ kpsi}$$

4-14

$$I = \frac{\pi}{64}(40^4) = 125.66(10^3) \text{ mm}^4$$

Superpose beams A-9-6 and A-9-7,

$$y_A = \frac{1500(600)400}{6(207)10^9(125.66)10^3(1000)} (400^2 + 600^2 - 1000^2)(10^3)^2 \\ + \frac{2000(400)}{24(207)10^9(125.66)10^3} [2(1000)400^2 - 400^3 - 1000^3]10^3$$

$$y_A = -2.061 \text{ mm} \quad \text{Ans.}$$

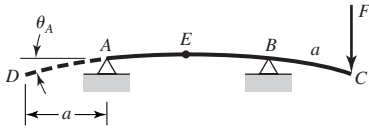
$$y|_{x=500} = \frac{1500(400)500}{24(207)10^9(125.66)10^3(1000)} [500^2 + 400^2 - 2(1000)500](10^3)^2 \\ - \frac{5(2000)1000^4}{384(207)10^9(125.66)10^3} 10^3 = -2.135 \text{ mm} \quad \text{Ans.}$$

$$\% \text{ difference} = \frac{2.135 - 2.061}{2.061}(100) = 3.59\% \quad \text{Ans.}$$

4-15

$$I = \frac{1}{12}(9)(35^3) = 32.156(10^3) \text{ mm}^4$$

From Table A-9-10



$$y_C = -\frac{Fa^2}{3EI}(l+a)$$

$$\frac{dy_{AB}}{dx} = \frac{Fa}{6EI}(l^2 - 3x^2)$$

Thus,

$$\theta_A = \frac{Fal^2}{6EI} = \frac{Fal}{6EI}$$

$$y_D = -\theta_A a = -\frac{Fa^2 l}{6EI}$$

With both loads,

$$\begin{aligned} y_D &= -\frac{Fa^2 l}{6EI} - \frac{Fa^2}{3EI}(l+a) \\ &= -\frac{Fa^2}{6EI}(3l+2a) = -\frac{500(250^2)}{6(207)(10^9)(32.156)(10^3)}[3(500) + 2(250)](10^3)^2 \\ &= -1.565 \text{ mm} \quad \text{Ans.} \end{aligned}$$

$$\begin{aligned} y_E &= \frac{2Fa(l/2)}{6EI} \left[l^2 - \left(\frac{l}{2} \right)^2 \right] = \frac{Fal^2}{8EI} \\ &= \frac{500(250)(500^2)(10^3)^2}{8(207)(10^9)(32.156)(10^3)} = 0.587 \text{ mm} \quad \text{Ans.} \end{aligned}$$

4-16 $a = 36 \text{ in}$, $l = 72 \text{ in}$, $I = 13 \text{ in}^4$, $E = 30 \text{ Mpsi}$

$$\begin{aligned} y &= \frac{F_1 a^2}{6EI}(a-3l) - \frac{F_2 l^3}{3EI} \\ &= \frac{400(36)^2(36-216)}{6(30)(10^6)(13)} - \frac{400(72)^3}{3(30)(10^6)(13)} \\ &= -0.1675 \text{ in} \quad \text{Ans.} \end{aligned}$$

4-17

$$I = 2(1.85) = 3.7 \text{ in}^4$$

Adding the weight of the channels, $2(5)/12 = 0.833 \text{ lbf/in}$,

$$\begin{aligned} y_A &= -\frac{wl^4}{8EI} - \frac{Fl^3}{3EI} = -\frac{10.833(48^4)}{8(30)(10^6)(3.7)} - \frac{220(48^3)}{3(30)(10^6)(3.7)} \\ &= -0.1378 \text{ in} \quad \text{Ans.} \end{aligned}$$

4-18

$$I = \pi d^4 / 64 = \pi (2)^4 / 64 = 0.7854 \text{ in}^4$$

Tables A-9-5 and A-9-9

$$\begin{aligned} y &= -\frac{F_2 l^3}{48EI} + \frac{F_1 a}{24EI} (4a^2 - 3l^2) \\ &= -\frac{120(40)^3}{48(30)(10^6)(0.7854)} + \frac{85(10)(400 - 4800)}{24(30)(10^6)(0.7854)} = -0.0134 \text{ in} \quad \text{Ans.} \end{aligned}$$

4-19

(a) Useful relations

$$k = \frac{F}{y} = \frac{48EI}{l^3}$$

$$I = \frac{kl^3}{48E} = \frac{2400(48)^3}{48(30)10^6} = 0.1843 \text{ in}^4$$

From $I = bh^3/12$

$$h = \sqrt[3]{\frac{12(0.1843)}{b}}$$

Form a table. First, Table A-17 gives likely available fractional sizes for b :

$$8\frac{1}{2}, 9, 9\frac{1}{2}, 10 \text{ in}$$

For h :

$$\frac{1}{2}, \frac{9}{16}, \frac{5}{8}, \frac{11}{16}, \frac{3}{4}$$

For available b what is necessary h for required I ?

b	$\sqrt[3]{\frac{12(0.1843)}{b}}$
8.5	0.638
9.0	0.626 ← choose $9'' \times \frac{5''}{8}$ Ans.
9.5	0.615
10.0	0.605

(b)

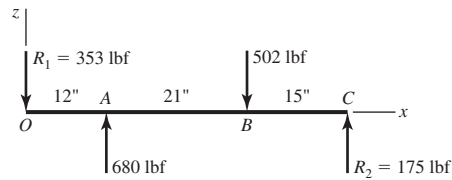
$$I = 9(0.625)^3/12 = 0.1831 \text{ in}^4$$

$$k = \frac{48EI}{l^3} = \frac{48(30)(10^6)(0.1831)}{48^3} = 2384 \text{ lbf/in}$$

$$F = \frac{4\sigma I}{cl} = \frac{4(90\,000)(0.1831)}{(0.625/2)(48)} = 4394 \text{ lbf}$$

$$y = \frac{F}{k} = \frac{4394}{2384} = 1.84 \text{ in} \quad \text{Ans.}$$

4-20



$$\text{Torque} = (600 - 80)(9/2) = 2340 \text{ lbf} \cdot \text{in}$$

$$(T_2 - T_1) \frac{12}{2} = T_2(1 - 0.125)(6) = 2340$$

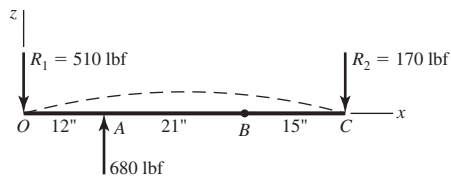
$$T_2 = \frac{2340}{6(0.875)} = 446 \text{ lbf}, \quad T_1 = 0.125(446) = 56 \text{ lbf}$$

$$\sum M_0 = 12(680) - 33(502) + 48R_2 = 0$$

$$R_2 = \frac{33(502) - 12(680)}{48} = 175 \text{ lbf}$$

$$R_1 = 680 - 502 + 175 = 353 \text{ lbf}$$

We will treat this as two separate problems and then sum the results. First, consider the 680 lbf load as acting alone.



$$z_{OA} = -\frac{Fbx}{6EI}(x^2 + b^2 - l^2); \quad \text{here } b = 36",$$

$$x = 12", \quad l = 48", \quad F = 680 \text{ lbf}$$

Also,

$$I = \frac{\pi d^4}{64} = \frac{\pi(1.5)^4}{64} = 0.2485 \text{ in}^4$$

$$z_A = -\frac{680(36)(12)(144 + 1296 - 2304)}{6(30)(10^6)(0.2485)(48)}$$

$$= +0.1182 \text{ in}$$

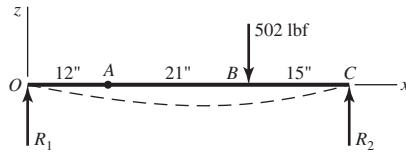
$$z_{AC} = -\frac{Fa(l-x)}{6EI}(x^2 + a^2 - 2lx)$$

where $a = 12"$ and $x = 21 + 12 = 33"$

$$z_B = -\frac{680(12)(15)(1089 + 144 - 3168)}{6(30)(10^6)(0.2485)(48)}$$

$$= +0.1103 \text{ in}$$

Next, consider the 502 lbf load as acting alone.



$$z_{OB} = \frac{Fbx}{6EI}(x^2 + b^2 - l^2), \quad \text{where } b = 15",$$

$$x = 12", \quad l = 48", \quad I = 0.2485 \text{ in}^4$$

$$\text{Then, } z_A = \frac{502(15)(12)(144 + 225 - 2304)}{6(30)(10^6)(0.2485)(48)} = -0.08144 \text{ in}$$

For z_B use $x = 33"$

$$z_B = \frac{502(15)(33)(1089 + 225 - 2304)}{6(30)(10^6)(0.2485)(48)} \\ = -0.1146 \text{ in}$$

Therefore, by superposition

$$z_A = +0.1182 - 0.0814 = +0.0368 \text{ in } \textit{Ans.}$$

$$z_B = +0.1103 - 0.1146 = -0.0043 \text{ in } \textit{Ans.}$$

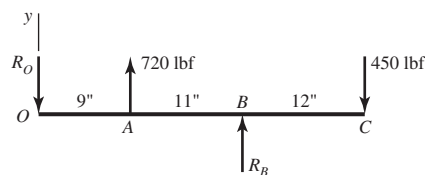
4-21

(a) Calculate torques and moment of inertia

$$T = (400 - 50)(16/2) = 2800 \text{ lbf} \cdot \text{in}$$

$$(8T_2 - T_2)(10/2) = 2800 \Rightarrow T_2 = 80 \text{ lbf}, \quad T_1 = 8(80) = 640 \text{ lbf}$$

$$I = \frac{\pi}{64}(1.25^4) = 0.1198 \text{ in}^4$$



Due to 720 lbf, flip beam A-9-6 such that $y_{AB} \rightarrow b = 9, x = 0, l = 20, F = -720 \text{ lbf}$

$$\theta_B = \frac{dy}{dx} \Big|_{x=0} = -\frac{Fb}{6EI}(3x^2 + b^2 - l^2) \\ = -\frac{-720(9)}{6(30)(10^6)(0.1198)(20)}(0 + 81 - 400) = -4.793(10^{-3}) \text{ rad}$$

$$y_C = -12\theta_B = -0.05752 \text{ in}$$

Due to 450 lbf, use beam A-9-10,

$$y_C = -\frac{Fa^2}{3EI}(l + a) = -\frac{450(144)(32)}{3(30)(10^6)(0.1198)} = -0.1923 \text{ in}$$

Adding the two deflections,

$$y_C = -0.05752 - 0.1923 = -0.2498 \text{ in } \textit{Ans.}$$

(b) At O :

Due to 450 lbf:

$$\left. \frac{dy}{dx} \right|_{x=0} = \frac{Fa}{6EI}(l^2 - 3x^2) \Big|_{x=0} = \frac{Fal}{6EI}$$

$$\theta_O = -\frac{720(11)(0 + 11^2 - 400)}{6(30)(10^6)(0.1198)(20)} + \frac{450(12)(20)}{6(30)(10^6)(0.1198)} = 0.01013 \text{ rad} = 0.5805^\circ$$

At B :

$$\begin{aligned} \theta_B &= -4.793(10^{-3}) + \frac{450(12)}{6(30)(10^6)(0.1198)(20)}[20^2 - 3(20^2)] \\ &= -0.01481 \text{ rad} = 0.8485^\circ \end{aligned}$$

$$I = 0.1198 \left(\frac{0.8485^\circ}{0.06^\circ} \right) = 1.694 \text{ in}^4$$

$$d = \left(\frac{64I}{\pi} \right)^{1/4} = \left[\frac{64(1.694)}{\pi} \right]^{1/4} = 2.424 \text{ in}$$

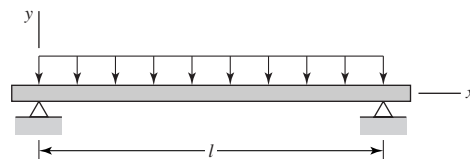
Use $d = 2.5 \text{ in } \textit{Ans.}$

$$I = \frac{\pi}{64}(2.5^4) = 1.917 \text{ in}^4$$

$$y_C = -0.2498 \left(\frac{0.1198}{1.917} \right) = -0.01561 \text{ in } \textit{Ans.}$$

4-22

(a) $l = 36(12) = 432 \text{ in}$



$$\begin{aligned} y_{\max} &= -\frac{5wl^4}{384EI} = -\frac{5(5000/12)(432)^4}{384(30)(10^6)(5450)} \\ &= -1.16 \text{ in} \end{aligned}$$

The frame is bowed up 1.16 in with respect to the bolsters. It is fabricated upside down and then inverted. *Ans.*

(b) The equation in xy -coordinates is for the center sill neutral surface

$$y = \frac{wx}{24EI}(2lx^2 - x^3 - l^3) \textit{ Ans.}$$

Differentiating this equation and solving for the slope at the left bolster gives

$$\frac{dy}{dx} = \frac{w}{24EI}(6lx^2 - 4x^3 - l^3)$$

Thus,

$$\begin{aligned} \left. \frac{dy}{dx} \right|_{x=0} &= -\frac{wl^3}{24EI} = -\frac{(5000/12)(432)^3}{24(30)(10^6)(5450)} \\ &= -0.00857 \end{aligned}$$

The slope at the right bolster is 0.00857, so equation at left end is $y = -0.00857x$ and at the right end is $y = 0.00857(x - l)$. *Ans.*

4-23 From Table A-9-6,

$$y_L = \frac{Fbx}{6EI}(x^2 + b^2 - l^2)$$

$$y_L = \frac{Fb}{6EI}(x^3 + b^2x - l^2x)$$

$$\frac{dy_L}{dx} = \frac{Fb}{6EI}(3x^2 + b^2 - l^2)$$

$$\left. \frac{dy_L}{dx} \right|_{x=0} = \frac{Fb(b^2 - l^2)}{6EI}$$

Let
$$\xi = \left| \frac{Fb(b^2 - l^2)}{6EI} \right|$$

And set
$$I = \frac{\pi d_L^4}{64}$$

And solve for d_L

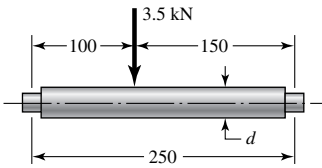
$$d_L = \left| \frac{32Fb(b^2 - l^2)}{3\pi E l \xi} \right|^{1/4} \quad \text{Ans.}$$

For the other end view, observe the figure of Table A-9-6 from the back of the page, noting that a and b interchange as do x and $-x$

$$d_R = \left| \frac{32Fa(l^2 - a^2)}{3\pi E l \xi} \right|^{1/4} \quad \text{Ans.}$$

For a uniform diameter shaft the necessary diameter is the larger of d_L and d_R .

4-24 Incorporating a design factor into the solution for d_L of Prob. 4-23,



$$d = \left[\frac{32n}{3\pi EI\xi} Fb(l^2 - b^2) \right]^{1/4}$$

$$= \left[(\text{mm } 10^{-3}) \frac{\text{kN mm}^3}{\text{GPa mm}} \frac{10^3(10^{-9})}{10^9(10^{-3})} \right]^{1/4}$$

$$d = 4 \sqrt[4]{ \frac{32(1.28)(3.5)(150)[(250^2 - 150^2)]}{3\pi(207)(250)(0.001)} } 10^{-12}$$

$$= 36.4 \text{ mm } \textit{Ans.}$$

4-25 The maximum occurs in the right section. Flip beam A-9-6 and use

$$y = \frac{Fbx}{6EI} (x^2 + b^2 - l^2) \quad \text{where } b = 100 \text{ mm}$$

$$\frac{dy}{dx} = \frac{Fb}{6EI} (3x^2 + b^2 - l^2) = 0$$

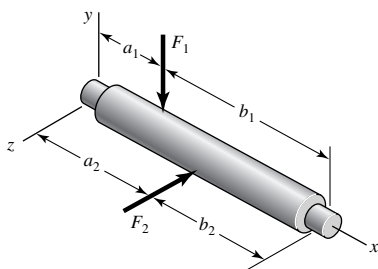
Solving for x ,

$$x = \sqrt{\frac{l^2 - b^2}{3}} = \sqrt{\frac{250^2 - 100^2}{3}} = 132.29 \text{ mm } \textit{from right}$$

$$y = \frac{3.5(10^3)(0.1)(0.13229)}{6(207)(10^9)(\pi/64)(0.0364^4)(0.25)} [0.13229^2 + 0.1^2 - 0.25^2](10^3)$$

$$= -0.0606 \text{ mm } \textit{Ans.}$$

4-26



The slope at $x = 0$ due to F_1 in the xy plane is

$$\theta_{xy} = \frac{F_1 b_1 (b_1^2 - l^2)}{6EI}$$

and in the xz plane due to F_2 is

$$\theta_{xz} = \frac{F_2 b_2 (b_2^2 - l^2)}{6EI}$$

For small angles, the slopes add as vectors. Thus

$$\theta_L = (\theta_{xy}^2 + \theta_{xz}^2)^{1/2}$$

$$= \left[\left(\frac{F_1 b_1 (b_1^2 - l^2)}{6EI} \right)^2 + \left(\frac{F_2 b_2 (b_2^2 - l^2)}{6EI} \right)^2 \right]^{1/2}$$

Designating the slope constraint as ξ , we then have

$$\xi = |\theta_L| = \frac{1}{6EI} \left\{ \sum [F_i b_i (b_i^2 - l^2)]^2 \right\}^{1/2}$$

Setting $I = \pi d^4/64$ and solving for d

$$d = \left| \frac{32}{3\pi E l \xi} \left\{ \sum [F_i b_i (b_i^2 - l^2)]^2 \right\}^{1/2} \right|^{1/4}$$

For the LH bearing, $E = 30$ Mpsi, $\xi = 0.001$, $b_1 = 12$, $b_2 = 6$, and $l = 16$. The result is $d_L = 1.31$ in. Using a similar flip beam procedure, we get $d_R = 1.36$ in for the RH bearing. So use $d = 1\ 3/8$ in *Ans.*

4-27 $I = \frac{\pi}{64}(1.375^4) = 0.17546$ in⁴. For the xy plane, use y_{BC} of Table A-9-6

$$y = \frac{100(4)(16 - 8)}{6(30)(10^6)(0.17546)(16)} [8^2 + 4^2 - 2(16)8] = -1.115(10^{-3}) \text{ in}$$

For the xz plane use y_{AB}

$$z = \frac{300(6)(8)}{6(30)(10^6)(0.17546)(16)} [8^2 + 6^2 - 16^2] = -4.445(10^{-3}) \text{ in}$$

$$\delta = (-1.115\mathbf{j} - 4.445\mathbf{k})(10^{-3}) \text{ in}$$

$$|\delta| = 4.583(10^{-3}) \text{ in } \textit{Ans.}$$

$$\begin{aligned} \mathbf{4-28} \quad d_L &= \left| \frac{32n}{3\pi E l \xi} \left\{ \sum [F_i b_i (b_i^2 - l^2)]^2 \right\}^{1/2} \right|^{1/4} \\ &= \left| \frac{32(1.5)}{3\pi(207)(10^9)(250)0.001} \left\{ [3.5(150)(150^2 - 250^2)]^2 \right. \right. \\ &\quad \left. \left. + [2.7(75)(75^2 - 250^2)]^2 \right\}^{1/2} (10^3)^3 \right|^{1/4} \\ &= 39.2 \text{ mm} \end{aligned}$$

$$\begin{aligned} d_R &= \left| \frac{32(1.5)}{3\pi(207)10^9(250)0.001} \left\{ [3.5(100)(100^2 - 250^2)]^2 \right. \right. \\ &\quad \left. \left. + [2.7(175)(175^2 - 250^2)]^2 \right\}^{1/2} (10^3)^3 \right|^{1/4} \\ &= 39.1 \text{ mm} \end{aligned}$$

Choose $d \geq 39.2$ mm *Ans.*

4-29 From Table A-9-8 we have

$$y_L = \frac{M_{Bx}}{6EI} (x^2 + 3a^2 - 6al + 2l^2)$$

$$\frac{dy_L}{dx} = \frac{M_B}{6EI} (3x^2 + 3a^2 - 6al + 2l^2)$$

At $x = 0$, the LH slope is

$$\theta_L = \frac{dy_L}{dx} = \frac{M_B}{6EI} (3a^2 - 6al + 2l^2)$$

from which

$$\xi = |\theta_L| = \frac{M_B}{6EI} (l^2 - 3b^2)$$

Setting $I = \pi d^4/64$ and solving for d

$$d = \left| \frac{32M_B(l^2 - 3b^2)}{3\pi E l \xi} \right|^{1/4}$$

For a multiplicity of moments, the slopes add vectorially and

$$d_L = \left| \frac{32}{3\pi E l \xi} \left\{ \sum [M_i(l^2 - 3b_i^2)]^2 \right\}^{1/2} \right|^{1/4}$$

$$d_R = \left| \frac{32}{3\pi E l \xi} \left\{ \sum [M_i(3a_i^2 - l^2)]^2 \right\}^{1/2} \right|^{1/4}$$

The greatest slope is at the LH bearing. So

$$d = \left| \frac{32(1200)[9^2 - 3(4^2)]}{3\pi(30)(10^6)(9)(0.002)} \right|^{1/4} = 0.706 \text{ in}$$

So use $d = 3/4$ in *Ans.*

4-30



$$6F_{AC} = 18(80)$$

$$F_{AC} = 240 \text{ lbf}$$

$$R_O = 160 \text{ lbf}$$

$$I = \frac{1}{12}(0.25)(2^3) = 0.1667 \text{ in}^4$$

Initially, ignore the stretch of AC. From Table A-9-10

$$y_{B1} = -\frac{Fa^2}{3EI}(l+a) = -\frac{80(12^2)}{3(10)(10^6)(0.1667)}(6+12) = -0.04147 \text{ in}$$

$$\text{Stretch of AC: } \delta = \left(\frac{FL}{AE} \right)_{AC} = \frac{240(12)}{(\pi/4)(1/2)^2(10)(10^6)} = 1.4668(10^{-3}) \text{ in}$$

Due to stretch of AC

$$y_{B2} = -3\delta = -4.400(10^{-3}) \text{ in}$$

By superposition, $y_B = -0.04147 - 0.0044 = -0.04587 \text{ in}$ *Ans.*

4-31

$$\theta = \frac{TL}{JG} = \frac{(0.1F)(1.5)}{(\pi/32)(0.012^4)(79.3)(10^9)} = 9.292(10^{-4})F$$

Due to twist

$$\delta_{B1} = 0.1(\theta) = 9.292(10^{-5})F$$

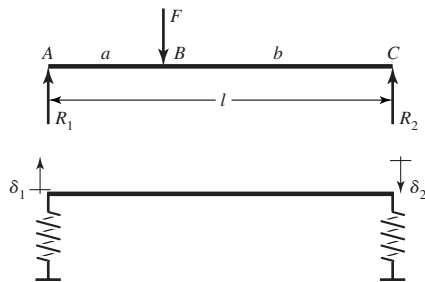
Due to bending

$$\delta_{B2} = \frac{FL^3}{3EI} = \frac{F(0.1^3)}{3(207)(10^9)(\pi/64)(0.012^4)} = 1.582(10^{-6})F$$

$$\delta_B = 1.582(10^{-6})F + 9.292(10^{-5})F = 9.450(10^{-5})F$$

$$k = \frac{1}{9.450(10^{-5})} = 10.58(10^3) \text{ N/m} = 10.58 \text{ kN/m} \quad \text{Ans.}$$

4-32



$$R_1 = \frac{Fb}{l} \quad R_2 = \frac{Fa}{l}$$

$$\delta_1 = \frac{R_1}{k_1} \quad \delta_2 = \frac{R_2}{k_2}$$

Spring deflection

$$y_S = -\delta_1 + \left(\frac{\delta_1 - \delta_2}{l}\right)x = -\frac{Fb}{k_1l} + \left(\frac{Fb}{k_1l^2} - \frac{Fa}{k_2l^2}\right)x$$

$$y_{AB} = \frac{Fbx}{6EI} (x^2 + b^2 - l^2) + \frac{Fx}{l^2} \left(\frac{b}{k_1} - \frac{a}{k_2}\right) - \frac{Fb}{k_1l} \quad \text{Ans.}$$

$$y_{BC} = \frac{Fa(l-x)}{6EI} (x^2 + a^2 - 2lx) + \frac{Fx}{l^2} \left(\frac{b}{k_1} - \frac{a}{k_2}\right) - \frac{Fb}{k_1l} \quad \text{Ans.}$$

4-33 See Prob. 4-32 for deflection due to springs. Replace Fb/l and Fa/l with $wl/2$

$$y_S = -\frac{wl}{2k_1} + \left(\frac{wl}{2k_1l} - \frac{wl}{2k_2l}\right)x = \frac{wx}{2} \left(\frac{1}{k_1} + \frac{1}{k_2}\right) - \frac{wl}{2k_1}$$

$$y = \frac{wx}{24EI} (2lx^2 - x^3 - l^3) + \frac{wx}{2} \left(\frac{1}{k_1} + \frac{1}{k_2}\right) - \frac{wl}{2k_1} \quad \text{Ans.}$$

4-34 Let the load be at $x > l/2$. The maximum deflection will be in Section AB (Table A-9-10)

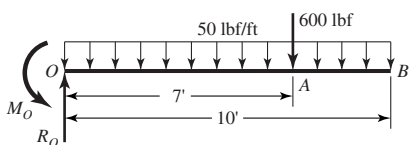
$$y_{AB} = \frac{Fbx}{6EI}(x^2 + b^2 - l^2)$$

$$\frac{dy_{AB}}{dx} = \frac{Fb}{6EI}(3x^2 + b^2 - l^2) = 0 \Rightarrow 3x^2 + b^2 - l^2 = 0$$

$$x = \sqrt{\frac{l^2 - b^2}{3}}, \quad x_{\max} = \sqrt{\frac{l^2}{3}} = 0.577l \quad \text{Ans.}$$

For $x < l/2$ $x_{\min} = l - 0.577l = 0.423l$ Ans.

4-35



$$M_O = 50(10)(60) + 600(84)$$

$$= 80\,400 \text{ lbf} \cdot \text{in}$$

$$R_O = 50(10) + 600 = 1100 \text{ lbf}$$

$I = 11.12 \text{ in}^4$ from Prob. 4-12

$$M = -80\,400 + 1100x - \frac{4.167x^2}{2} - 600\langle x - 84 \rangle^1$$

$$EI \frac{dy}{dx} = -80\,400x + 550x^2 - 0.6944x^3 - 300\langle x - 84 \rangle^2 + C_1$$

$$\frac{dy}{dx} = 0 \text{ at } x = 0 \quad \therefore C_1 = 0$$

$$EIy = -40\,200x^2 + 183.33x^3 - 0.1736x^4 - 100\langle x - 84 \rangle^3 + C_2$$

$$y = 0 \text{ at } x = 0 \quad \therefore C_2 = 0$$

$$y_B = \frac{1}{30(10^6)(11.12)} [-40\,200(120^2) + 183.33(120^3) - 0.1736(120^4) - 100(120 - 84)^3]$$

$$= -0.9075 \text{ in} \quad \text{Ans.}$$

4-36 See Prob. 4-13 for reactions: $R_O = 860 \text{ lbf}$, $R_C = 540 \text{ lbf}$

$$M = 860x - 800\langle x - 36 \rangle^1 - 600\langle x - 60 \rangle^1$$

$$EI \frac{dy}{dx} = 430x^2 - 400\langle x - 36 \rangle^2 - 300\langle x - 60 \rangle^2 + C_1$$

$$EIy = 143.33x^3 - 133.33\langle x - 36 \rangle^3 - 100\langle x - 60 \rangle^3 + C_1x + C_2$$

$$y = 0 \text{ at } x = 0 \Rightarrow C_2 = 0$$

$$y = 0 \text{ at } x = 120 \text{ in} \Rightarrow C_1 = -1.2254(10^6) \text{ lbf} \cdot \text{in}^2$$

Substituting C_1 and C_2 and evaluating at $x = 60$,

$$EIy = 30(10^6)I \left(-\frac{1}{16} \right) = 143.33(60^3) - 133.33(60 - 36)^3 - 1.2254(10^6)(60)$$

$$I = 23.68 \text{ in}^4$$

Agrees with Prob. 4-13. The rest of the solution is the same.

4-37

$$I = \frac{\pi}{64}(40^4) = 125.66(10^3) \text{ mm}^4$$

$$R_O = 2(500) + \frac{600}{1000}1500 = 1900 \text{ N}$$

$$M = 1900x - \frac{2000}{2}x^2 - 1500(x - 0.4)^1 \text{ where } x \text{ is in meters}$$

$$EI \frac{dy}{dx} = 950x^2 - \frac{1000}{3}x^3 - 750(x - 0.4)^2 + C_1$$

$$EIy = \frac{900}{3}x^3 - \frac{250}{3}x^4 - 250(x - 0.4)^3 + C_1x + C_2$$

$$y = 0 \text{ at } x = 0 \Rightarrow C_2 = 0$$

$$y = 0 \text{ at } x = 1 \text{ m} \Rightarrow C_1 = -179.33 \text{ N} \cdot \text{m}^2$$

Substituting C_1 and C_2 and evaluating y at $x = 0.4$ m,

$$y_A = \frac{1}{207(10^9)125.66(10^{-9})} \left[\frac{950}{3}(0.4^3) - \frac{250}{3}(0.4^4) - 179.33(0.4) \right] 10^3$$

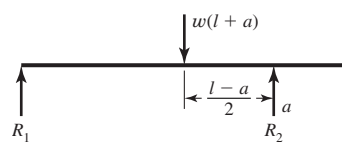
$$= -2.061 \text{ mm} \quad \text{Ans.}$$

$$y|_{x=500} = \frac{1}{207(10^9)125.66(10^{-9})} \left[\frac{950}{3}(0.5^3) - \frac{250}{3}(0.5^4) \right. \\ \left. - 250(0.5 - 0.4)^3 - 179.33(0.5) \right] 10^3$$

$$= -2.135 \text{ mm} \quad \text{Ans.}$$

$$\% \text{ difference} = \frac{2.135 - 2.061}{2.061}(100) = 3.59\% \quad \text{Ans.}$$

4-38



$$R_1 = \frac{w(l+a)[(l-a)/2]}{l}$$

$$= \frac{w}{2l}(l^2 - a^2)$$

$$R_2 = w(l+a) - \frac{w}{2l}(l^2 - a^2) = \frac{w}{2l}(l+a)^2$$

$$M = \frac{w}{2l}(l^2 - a^2)x - \frac{wx^2}{2} + \frac{w}{2l}(l+a)^2(x-l)^1$$

$$EI \frac{dy}{dx} = \frac{w}{4l}(l^2 - a^2)x^2 - \frac{w}{6}x^3 + \frac{w}{4l}(l+a)^2(x-l)^2 + C_1$$

$$EIy = \frac{w}{12l}(l^2 - a^2)x^3 - \frac{w}{24}x^4 + \frac{w}{12l}(l+a)^2(x-l)^3 + C_1x + C_2$$

$$y = 0 \text{ at } x = 0 \Rightarrow C_2 = 0$$

$$y = 0 \text{ at } x = l$$

$$0 = \frac{w}{12l}(l^2 - a^2)l^3 - \frac{w}{24}l^4 + C_1l \Rightarrow C_1 = \frac{wl}{24}(2a^2 - l^2)$$

$$y = \frac{w}{24EI}[2(l^2 - a^2)x^3 - lx^4 + 2(l + a)^2(x - l)^3 + l^2(2a^2 - l^2)x] \quad \text{Ans.}$$

4-39 $R_A = R_B = 500 \text{ N}$, and $I = \frac{1}{12}(9)35^3 = 32.156(10^3) \text{ mm}^4$

For first half of beam, $M = -500x + 500(x - 0.25)^1$ where x is in meters

$$EI \frac{dy}{dx} = -250x^2 + 250(x - 0.25)^2 + C_1$$

At $x = 0.5 \text{ m}$, $dy/dx = 0 \Rightarrow 0 = -250(0.5^2) + 250(0.5 - 0.25)^2 + C_1 \Rightarrow C_1 = 46.875 \text{ N} \cdot \text{m}^2$

$$EIy = -\frac{250}{3}x^3 + \frac{250}{3}(x - 0.25)^3 + 46.875x + C_2$$

$$y = 0 \text{ at } x = 0.25 \text{ m} \Rightarrow 0 = -\frac{250}{3}(0.25)^3 + 46.875(0.25) + C_2 \Rightarrow C_2 = -10.417 \text{ N} \cdot \text{m}^3$$

$$\therefore EIy = -\frac{250}{3}x^3 + \frac{250}{3}(x - 0.25)^3 + 46.875x - 10.42$$

Evaluating y at A and the center,

$$y_A = \frac{1}{207(10^9)32.156(10^{-9})} \left[-\frac{250}{3}(0^3) + \frac{250}{3}(0)^3 + 46.875(0) - 10.417 \right] 10^3$$

$$= -1.565 \text{ mm} \quad \text{Ans.}$$

$$y|_{x=0.5\text{m}} = \frac{1}{207(10^9)32.156(10^{-9})} \left[-\frac{250}{3}(0.5^3) + \frac{250}{3}(0.5 - 0.25)^3 + 46.875(0.5) - 10.417 \right] 10^3$$

$$= -2.135 \text{ mm} \quad \text{Ans.}$$

4-40 From Prob. 4-30, $R_O = 160 \text{ lbf} \downarrow$, $F_{AC} = 240 \text{ lbf}$ $I = 0.1667 \text{ in}^4$

$$M = -160x + 240(x - 6)^1$$

$$EI \frac{dy}{dx} = -80x^2 + 120(x - 6)^2 + C_1$$

$$EIy = -26.67x^3 + 40(x - 6)^3 + C_1x + C_2$$

$$y = 0 \text{ at } x = 0 \Rightarrow C_2 = 0$$

$$y_A = -\left(\frac{FL}{AE}\right)_{AC} = -\frac{240(12)}{(\pi/4)(1/2)^2(10)(10^6)} = -1.4668(10^{-3}) \text{ in}$$

at $x = 6$

$$10(10^6)(0.1667)(-1.4668)(10^{-3}) = -26.67(6^3) + C_1(6)$$

$$C_1 = 552.58 \text{ lbf} \cdot \text{in}^2$$

$$y_B = \frac{1}{10(10^6)(0.1667)} [-26.67(18^3) + 40(18 - 6)^3 + 552.58(18)]$$

$$= -0.04587 \text{ in } \textit{Ans.}$$

4-41

$$I_1 = \frac{\pi}{64}(1.5^4) = 0.2485 \text{ in}^4 \quad I_2 = \frac{\pi}{64}(2^4) = 0.7854 \text{ in}^4$$

$$R_1 = \frac{200}{2}(12) = 1200 \text{ lbf}$$

$$\text{For } 0 \leq x \leq 16 \text{ in, } M = 1200x - \frac{200}{2}(x - 4)^2$$

$$\frac{M}{I} = \frac{1200x}{I_1} - 4800 \left(\frac{1}{I_1} - \frac{1}{I_2} \right) (x - 4)^0 - 1200 \left(\frac{1}{I_1} - \frac{1}{I_2} \right) (x - 4)^1 - \frac{100}{I_2} (x - 4)^2$$

$$= 4829x - 13204(x - 4)^0 - 3301.1(x - 4)^1 - 127.32(x - 4)^2$$

$$E \frac{dy}{dx} = 2414.5x^2 - 13204(x - 4)^1 - 1651(x - 4)^2 - 42.44(x - 4)^3 + C_1$$

$$\text{Boundary Condition: } \frac{dy}{dx} = 0 \quad \text{at } x = 10 \text{ in}$$

$$0 = 2414.5(10^2) - 13204(10 - 4)^1 - 1651(10 - 4)^2 - 42.44(10 - 4)^3 + C_1$$

$$C_1 = -9.362(10^4)$$

$$Ey = 804.83x^3 - 6602(x - 4)^2 - 550.3(x - 4)^3 - 10.61(x - 4)^4 - 9.362(10^4)x + C_2$$

$$y = 0 \quad \text{at } x = 0 \Rightarrow C_2 = 0$$

For $0 \leq x \leq 16$ in

$$y = \frac{1}{30(10^6)} [804.83x^3 - 6602(x - 4)^2 - 550.3(x - 4)^3 - 10.61(x - 4)^4 - 9.362(10^4)x] \textit{ Ans.}$$

at $x = 10$ in

$$y|_{x=10} = \frac{1}{30(10^6)} [804.83(10^3) - 6602(10 - 4)^2 - 550.3(10 - 4)^3 - 10.61(10 - 4)^4 - 9.362(10^4)(10)]$$

$$= -0.01672 \text{ in } \textit{Ans.}$$

4-42 $q = F(x)^{-1} - Fl(x)^{-2} - F(x - l)^{-1}$

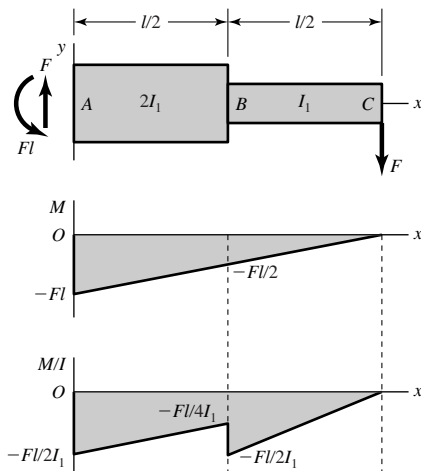
Integrations produce

$$V = F(x)^0 - Fl(x)^{-1} - F(x - l)^0$$

$$M = F(x)^1 - Fl(x)^0 - F(x - l)^1 = Fx - Fl$$



Plots for M and M/I are shown below



M/I can be expressed by singularity functions as

$$\frac{M}{I} = \frac{F}{2I_1}x - \frac{Fl}{2I_1} - \frac{Fl}{4I_1}\left\langle x - \frac{l}{2} \right\rangle^0 + \frac{F}{2I_1}\left\langle x - \frac{l}{2} \right\rangle^1$$

where the step down and increase in slope at $x = l/2$ are given by the last two terms.

Since $E d^2y/dx^2 = M/I$, two integrations yield

$$E \frac{dy}{dx} = \frac{F}{4I_1}x^2 - \frac{Fl}{2I_1}x - \frac{Fl}{4I_1}\left\langle x - \frac{l}{2} \right\rangle^1 + \frac{F}{4I_1}\left\langle x - \frac{l}{2} \right\rangle^2 + C_1$$

$$Ey = \frac{F}{12I_1}x^3 - \frac{Fl}{4I_1}x^2 - \frac{Fl}{8I_1}\left\langle x - \frac{l}{2} \right\rangle^2 + \frac{F}{12I_1}\left\langle x - \frac{l}{2} \right\rangle^3 + C_1x + C_2$$

At $x = 0$, $y = dy/dx = 0$. This gives $C_1 = C_2 = 0$, and

$$y = \frac{F}{24EI_1} \left(2x^3 - 6lx^2 - 3l\left\langle x - \frac{l}{2} \right\rangle^2 + 2\left\langle x - \frac{l}{2} \right\rangle^3 \right)$$

At $x = l/2$ and l ,

$$y|_{x=l/2} = \frac{F}{24EI_1} \left[2\left(\frac{l}{2}\right)^3 - 6l\left(\frac{l}{2}\right)^2 - 3l(0) + 2(0) \right] = -\frac{5Fl^3}{96EI_1} \quad \text{Ans.}$$

$$y|_{x=l} = \frac{F}{24EI_1} \left[2(l)^3 - 6l(l)^2 - 3l\left(l - \frac{l}{2}\right)^2 + 2\left(l - \frac{l}{2}\right)^3 \right] = -\frac{3Fl^3}{16EI_1} \quad \text{Ans.}$$

The answers are identical to Ex. 4-11.

- 4-43** Define δ_{ij} as the deflection in the direction of the load at station i due to a unit load at station j . If U is the potential energy of strain for a body obeying Hooke's law, apply P_1 first. Then

$$U = \frac{1}{2} P_1 (P_1 \delta_{11})$$

When the second load is added, U becomes

$$U = \frac{1}{2}P_1(P_1\delta_{11}) + \frac{1}{2}P_2(P_2\delta_{22}) + P_1(P_2\delta_{12})$$

For loading in the reverse order

$$U' = \frac{1}{2}P_2(P_2\delta_{22}) + \frac{1}{2}P_1(P_1\delta_{11}) + P_2(P_1\delta_{21})$$

Since the order of loading is immaterial $U = U'$ and

$$P_1P_2\delta_{12} = P_2P_1\delta_{21} \quad \text{when } P_1 = P_2, \delta_{12} = \delta_{21}$$

which states that the deflection at station 1 due to a unit load at station 2 is the same as the deflection at station 2 due to a unit load at 1. δ is sometimes called an *influence coefficient*.

4-44

(a) From Table A-9-10

$$y_{AB} = \frac{Fcx(l^2 - x^2)}{6EI}$$

$$\delta_{12} = \left. \frac{y}{F} \right|_{x=a} = \frac{ca(l^2 - a^2)}{6EI}$$

$$y_2 = F\delta_{21} = F\delta_{12} = \frac{Fca(l^2 - a^2)}{6EI}$$

Substituting $I = \frac{\pi d^4}{64}$

$$y_2 = \frac{400(7)(9)(23^2 - 9^2)(64)}{6(30)(10^6)(\pi)(2)^4(23)} = 0.00347 \text{ in } \textit{Ans.}$$

(b) The slope of the shaft at *left* bearing at $x = 0$ is

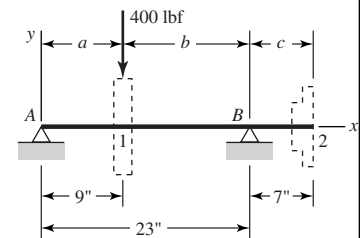
$$\theta = \frac{Fb(b^2 - l^2)}{6EI}$$

Viewing the illustration in Section 6 of Table A-9 from the back of the page provides the correct view of this problem. Noting that a is to be interchanged with b and $-x$ with x leads to

$$\theta = \frac{Fa(l^2 - a^2)}{6EI} = \frac{Fa(l^2 - a^2)(64)}{6E\pi d^4 l}$$

$$\theta = \frac{400(9)(23^2 - 9^2)(64)}{6(30)(10^6)(\pi)(2)^4(23)} = 0.000496 \text{ in/in}$$

So $y_2 = 7\theta = 7(0.000496) = 0.00347 \text{ in } \textit{Ans.}$



4-45 Place a dummy load Q at the center. Then,

$$M = \frac{wx}{2}(l-x) + \frac{Qx}{2}$$

$$U = 2 \int_0^{l/2} \frac{M^2 dx}{2EI}, \quad y_{\max} = \left. \frac{\partial U}{\partial Q} \right|_{Q=0}$$

$$y_{\max} = 2 \left[\int_0^{l/2} \frac{2M}{2EI} \left(\frac{\partial M}{\partial Q} \right) dx \right]_{Q=0}$$

$$y_{\max} = \frac{2}{EI} \left\{ \int_0^{l/2} \left[\frac{wx}{2}(l-x) + \frac{Qx}{2} \right] \frac{x}{2} dx \right\}_{Q=0}$$

Set $Q = 0$ and integrate

$$y_{\max} = \frac{w}{2EI} \left(\frac{lx^3}{3} - \frac{x^4}{4} \right) \Big|_0^{l/2}$$

$$y_{\max} = \frac{5wl^4}{384EI} \quad \text{Ans.}$$

4-46

$$I = 2(1.85) = 3.7 \text{ in}^4$$

Adding weight of channels of $0.833 \text{ lbf} \cdot \text{in}$,

$$M = -Fx - \frac{10.833}{2}x^2 = -Fx - 5.417x^2 \quad \frac{\partial M}{\partial F} = -x$$

$$\delta_B = \frac{1}{EI} \int_0^{48} M \frac{\partial M}{\partial F} dx = \frac{1}{EI} \int_0^{48} (Fx + 5.417x^2)(x) dx$$

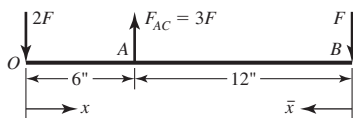
$$= \frac{(220/3)(48^3) + (5.417/4)(48^4)}{30(10^6)(3.7)} = 0.1378 \text{ in} \quad \text{in direction of 220 lbf}$$

$$\therefore y_B = -0.1378 \text{ in} \quad \text{Ans.}$$

4-47

$$I_{OB} = \frac{1}{12}(0.25)(2^3) = 0.1667 \text{ in}^4, \quad A_{AC} = \frac{\pi}{4} \left(\frac{1}{2} \right)^2 = 0.19635 \text{ in}^2$$

$$F_{AC} = 3F, \quad \frac{\partial F_{AC}}{\partial F} = 3$$



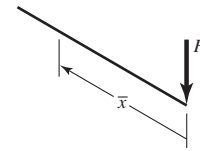
$$M = -F\bar{x} \quad \text{right} \quad M = -2Fx \quad \text{left}$$

$$\frac{\partial M}{\partial F} = -\bar{x} \quad \frac{\partial M}{\partial F} = -2x$$

$$\begin{aligned}
 U &= \frac{1}{2EI} \int_0^l M^2 dx + \frac{F_{AC}^2 L_{AC}}{2A_{AC}E} \\
 \delta_B &= \frac{\partial U}{\partial F} = \frac{1}{EI} \int_0^l M \frac{\partial M}{\partial F} dx + \frac{F_{AC}(\partial F_{AC}/\partial F)L_{AC}}{A_{AC}E} \\
 &= \frac{1}{EI} \left[\int_0^{12} -F\bar{x}(-\bar{x}) d\bar{x} + \int_0^6 (-2Fx)(-2x) dx \right] + \frac{3F(3)(12)}{A_{AC}E} \\
 &= \frac{1}{EI} \left[\frac{F}{3}(12^3) + 4F \left(\frac{6^3}{3} \right) \right] + \frac{108F}{A_{AC}E} \\
 &= \frac{864F}{EI} + \frac{108F}{A_{AC}E} \\
 &= \frac{864(80)}{10(10^6)(0.1667)} + \frac{108(80)}{0.19635(10)(10^6)} = 0.04586 \text{ in } \textit{Ans.}
 \end{aligned}$$

4-48

Torsion	$T = 0.1F$	$\frac{\partial T}{\partial F} = 0.1$
Bending	$M = -F\bar{x}$	$\frac{\partial M}{\partial F} = -\bar{x}$



$$\begin{aligned}
 U &= \frac{1}{2EI} \int M^2 dx + \frac{T^2 L}{2JG} \\
 \delta_B &= \frac{\partial U}{\partial F} = \frac{1}{EI} \int M \frac{\partial M}{\partial F} dx + \frac{T(\partial T/\partial F)L}{JG} \\
 &= \frac{1}{EI} \int_0^{0.1} -F\bar{x}(-\bar{x}) d\bar{x} + \frac{0.1F(0.1)(1.5)}{JG} \\
 &= \frac{F}{3EI}(0.1^3) + \frac{0.015F}{JG}
 \end{aligned}$$

Where

$$I = \frac{\pi}{64}(0.012)^4 = 1.0179(10^{-9}) \text{ m}^4$$

$$J = 2I = 2.0358(10^{-9}) \text{ m}^4$$

$$\delta_B = F \left[\frac{0.001}{3(207)(10^9)(1.0179)(10^{-9})} + \frac{0.015}{2.0358(10^{-9})(79.3)(10^9)} \right] = 9.45(10^{-5})F$$

$$k = \frac{1}{9.45(10^{-5})} = 10.58(10^3) \text{ N/m} = 10.58 \text{ kN/m } \textit{Ans.}$$

4-49 From Prob. 4-41, $I_1 = 0.2485 \text{ in}^4$, $I_2 = 0.7854 \text{ in}^4$

For a dummy load $\uparrow Q$ at the center

$$0 \leq x \leq 10 \text{ in} \quad M = 1200x - \frac{Q}{2}x - \frac{200}{2}(x-4)^2, \quad \frac{\partial M}{\partial Q} = \frac{-x}{2}$$

$$y|_{x=10} = \frac{\partial U}{\partial Q} \Big|_{Q=0}$$

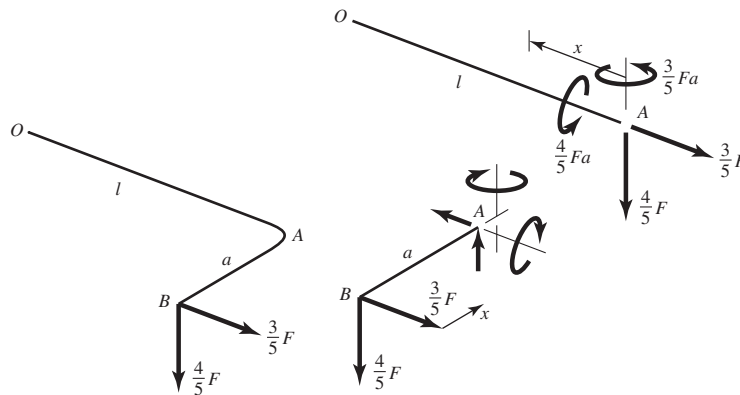
$$= \frac{2}{E} \left\{ \frac{1}{I_1} \int_0^4 (1200x) \left(-\frac{x}{2} \right) dx + \frac{1}{I_2} \int_4^{10} [1200x - 100(x-4)^2] \left(-\frac{x}{2} \right) dx \right\}$$

$$= \frac{2}{E} \left[-\frac{200(4^3)}{I_1} - \frac{1.566(10^5)}{I_2} \right]$$

$$= -\frac{2}{30(10^6)} \left(\frac{1.28(10^4)}{0.2485} + \frac{1.566(10^5)}{0.7854} \right)$$

$$= -0.01673 \text{ in} \quad \text{Ans.}$$

4-50



AB

$$M = Fx \quad \frac{\partial M}{\partial F} = x$$

OA

$$N = \frac{3}{5}F \quad \frac{\partial N}{\partial F} = \frac{3}{5}$$

$$T = \frac{4}{5}Fa \quad \frac{\partial T}{\partial F} = \frac{4}{5}a$$

$$M_1 = \frac{4}{5}F\bar{x} \quad \frac{\partial M_1}{\partial F} = \frac{4}{5}\bar{x}$$

$$M_2 = \frac{3}{5}Fa \quad \frac{\partial M_2}{\partial F} = \frac{3}{5}a$$

$$\begin{aligned}\delta_B &= \frac{\partial u}{\partial F} = \frac{1}{EI} \int_0^a Fx(x) dx + \frac{(3/5)F(3/5)l}{AE} + \frac{(4/5)Fa(4a/5)l}{JG} \\ &\quad + \frac{1}{EI} \int_0^l \frac{4}{5}F\bar{x} \left(\frac{4}{5}\bar{x}\right) d\bar{x} + \frac{1}{EI} \int_0^l \frac{3}{5}Fa \left(\frac{3}{5}a\right) d\bar{x} \\ &= \frac{Fa^3}{3EI} + \frac{9}{25} \left(\frac{Fl}{AE}\right) + \frac{16}{25} \left(\frac{Fa^2l}{JG}\right) + \frac{16}{75} \left(\frac{Fl^3}{EI}\right) + \frac{9}{25} \left(\frac{Fa^2l}{EI}\right)\end{aligned}$$

$$I = \frac{\pi}{64}d^4, \quad J = 2I, \quad A = \frac{\pi}{4}d^2$$

$$\begin{aligned}\delta_B &= \frac{64Fa^3}{3E\pi d^4} + \frac{9}{25} \left(\frac{4Fl}{\pi d^2 E}\right) + \frac{16}{25} \left(\frac{32Fa^2l}{\pi d^4 G}\right) + \frac{16}{75} \left(\frac{64Fl^3}{E\pi d^4}\right) + \frac{9}{25} \left(\frac{64Fa^2l}{E\pi d^4}\right) \\ &= \frac{4F}{75\pi Ed^4} \left(400a^3 + 27ld^2 + 384a^2l \frac{E}{G} + 256l^3 + 432a^2l\right) \quad \text{Ans.}\end{aligned}$$

4-51 The force applied to the copper and steel wire assembly is $F_c + F_s = 250$ lbf

Since $\delta_c = \delta_s$

$$\frac{F_c L}{3(\pi/4)(0.0801)^2(17.2)(10^6)} = \frac{F_s L}{(\pi/4)(0.0625)^2(30)(10^6)}$$

$$F_c = 2.825 F_s$$

$$\therefore 3.825 F_s = 250 \Rightarrow F_s = 65.36 \text{ lbf}, \quad F_c = 2.825 F_s = 184.64 \text{ lbf}$$

$$\sigma_c = \frac{184.64}{3(\pi/4)(0.0801)^2} = 12\,200 \text{ psi} = 12.2 \text{ kpsi} \quad \text{Ans.}$$

$$\sigma_s = \frac{65.36}{(\pi/4)(0.0625)^2} = 21\,300 \text{ psi} = 21.3 \text{ kpsi} \quad \text{Ans.}$$

4-52

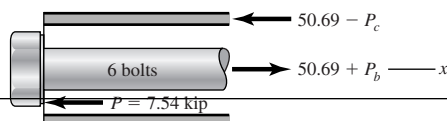
(a) Bolt stress $\sigma_b = 0.9(85) = 76.5 \text{ kpsi} \quad \text{Ans.}$

Bolt force $F_b = 6(76.5) \left(\frac{\pi}{4}\right) (0.375^2) = 50.69 \text{ kips}$

Cylinder stress $\sigma_c = -\frac{F_b}{A_c} = -\frac{50.69}{(\pi/4)(4.5^2 - 4^2)} = -15.19 \text{ kpsi} \quad \text{Ans.}$

(b) Force from pressure

$$P = \frac{\pi D^2}{4} p = \frac{\pi(4^2)}{4} (600) = 7540 \text{ lbf} = 7.54 \text{ kip}$$



$$\begin{aligned}\sum F_x &= 0 \\ P_b + P_c &= 7.54 \quad (1)\end{aligned}$$

$$\text{Since } \delta_c = \delta_b, \quad \frac{P_c L}{(\pi/4)(4.5^2 - 4^2)E} = \frac{P_b L}{6(\pi/4)(0.375^2)E}$$

$$P_c = 5.037P_b \quad (2)$$

Substituting into Eq. (1)

$$6.037P_b = 7.54 \Rightarrow P_b = 1.249 \text{ kip; and from Eq. (2), } P_c = 6.291 \text{ kip}$$

Using the results of (a) above, the total bolt and cylinder stresses are

$$\sigma_b = 76.5 + \frac{1.249}{6(\pi/4)(0.375^2)} = 78.4 \text{ kpsi Ans.}$$

$$\sigma_c = -15.19 + \frac{6.291}{(\pi/4)(4.5^2 - 4^2)} = -13.3 \text{ kpsi Ans.}$$

4-53

$$T = T_c + T_s \quad \text{and} \quad \theta_c = \theta_s$$

Also,

$$\frac{T_c L}{(GJ)_c} = \frac{T_s L}{(GJ)_s}$$

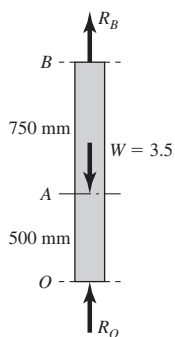
$$T_c = \frac{(GJ)_c}{(GJ)_s} T_s$$

Substituting into equation for T ,

$$T = \left[1 + \frac{(GJ)_c}{(GJ)_s} \right] T_s$$

$$\%T_s = \frac{T_s}{T} = \frac{(GJ)_s}{(GJ)_s + (GJ)_c} \text{ Ans.}$$

4-54



$$R_O + R_B = W \quad (1)$$

$$\delta_{OA} = \delta_{AB} \quad (2)$$

$$\frac{500R_O}{AE} = \frac{750R_B}{AE}, \quad R_O = \frac{3}{2}R_B$$

$$\frac{3}{2}R_B + R_B = 3.5$$

$$R_B = \frac{7}{5} = 1.4 \text{ kN Ans.}$$

$$R_O = 3.5 - 1.4 = 2.1 \text{ kN Ans.}$$

$$\sigma_O = -\frac{2100}{12(50)} = -3.50 \text{ MPa Ans.}$$

$$\sigma_B = \frac{1400}{12(50)} = 2.33 \text{ MPa Ans.}$$

4-55 Since $\theta_{OA} = \theta_{AB}$

$$\frac{T_{OA}(4)}{GJ} = \frac{T_{AB}(6)}{GJ}, \quad T_{OA} = \frac{3}{2}T_{AB}$$

Also $T_{OA} + T_{AB} = 50$

$$T_{AB} \left(\frac{3}{2} + 1 \right) = 50, \quad T_{AB} = \frac{50}{2.5} = 20 \text{ lbf} \cdot \text{in} \quad \text{Ans.}$$

$$T_{OA} = \frac{3}{2}T_{AB} = \frac{3}{2}(20) = 30 \text{ lbf} \cdot \text{in} \quad \text{Ans.}$$

4-56 Since $\theta_{OA} = \theta_{AB}$,

$$\frac{T_{OA}(4)}{G\left(\frac{\pi}{32}1.5^4\right)} = \frac{T_{AB}(6)}{G\left(\frac{\pi}{32}1.75^4\right)}, \quad T_{OA} = 0.80966T_{AB}$$

$$T_{OA} + T_{AB} = 50 \Rightarrow 0.80966T_{AB} + T_{AB} = 50 \Rightarrow T_{AB} = 27.63 \text{ lbf} \cdot \text{in} \quad \text{Ans.}$$

$$T_{OA} = 0.80966T_{AB} = 0.80966(27.63) = 22.37 \text{ lbf} \cdot \text{in} \quad \text{Ans.}$$

4-57

$$F_1 = F_2 \Rightarrow \frac{T_1}{r_1} = \frac{T_2}{r_2} \Rightarrow \frac{T_1}{1.25} = \frac{T_2}{3}$$

$$T_2 = \frac{3}{1.25}T_1$$

$$\therefore \theta_1 + \frac{3}{1.25}\theta_2 = \frac{4\pi}{180} \text{ rad}$$

$$\frac{T_1(48)}{(\pi/32)(7/8)^4(11.5)(10^6)} + \frac{3}{1.25} \left[\frac{(3/1.25)T_1(48)}{(\pi/32)(1.25)^4(11.5)(10^6)} \right] = \frac{4\pi}{180}$$

$$T_1 = 403.9 \text{ lbf} \cdot \text{in}$$

$$T_2 = \frac{3}{1.25}T_1 = 969.4 \text{ lbf} \cdot \text{in}$$

$$\tau_1 = \frac{16T_1}{\pi d^3} = \frac{16(403.9)}{\pi(7/8)^3} = 3071 \text{ psi} \quad \text{Ans.}$$

$$\tau_2 = \frac{16(969.4)}{\pi(1.25)^3} = 2528 \text{ psi} \quad \text{Ans.}$$

4-58



(1) Arbitrarily, choose R_C as redundant reaction

$$(2) \quad \sum F_x = 0, \quad 10(10^3) - 5(10^3) - R_O - R_C = 0$$

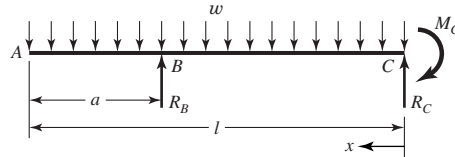
$$R_O + R_C = 5(10^3) \text{ lbf}$$

$$(3) \quad \delta_C = \frac{[10(10^3) - 5(10^3) - R_C]20}{AE} - \frac{[5(10^3) + R_C](10)}{AE} - \frac{R_C(15)}{AE} = 0$$

$$-45R_C + 5(10^4) = 0 \Rightarrow R_C = 1111 \text{ lbf Ans.}$$

$$R_O = 5000 - 1111 = 3889 \text{ lbf Ans.}$$

4-59



(1) Choose R_B as redundant reaction

$$(2) \quad R_B + R_C = wl \quad (a) \quad R_B(l - a) - \frac{wl^2}{2} + M_C = 0 \quad (b)$$

$$(3) \quad y_B = \frac{R_B(l - a)^3}{3EI} + \frac{w(l - a)^2}{24EI} [4l(l - a) - (l - a)^2 - 6l^2] = 0$$

$$R_B = \frac{w}{8(l - a)} [6l^2 - 4l(l - a) + (l - a)^2]$$

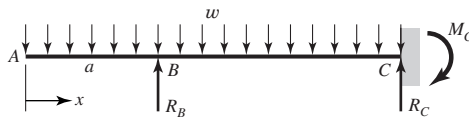
$$= \frac{w}{8(l - a)} (3l^2 + 2al + a^2) \text{ Ans.}$$

Substituting,

$$\text{Eq. (a)} \quad R_C = wl - R_B = \frac{w}{8(l - a)} (5l^2 - 10al - a^2) \text{ Ans.}$$

$$\text{Eq. (b)} \quad M_C = \frac{wl^2}{2} - R_B(l - a) = \frac{w}{8} (l^2 - 2al - a^2) \text{ Ans.}$$

4-60



$$M = -\frac{wx^2}{2} + R_B(x - a)^1, \quad \frac{\partial M}{\partial R_B} = (x - a)^1$$

$$\frac{\partial U}{\partial R_B} = \frac{1}{EI} \int_0^l M \frac{\partial M}{\partial R_B} dx$$

$$= \frac{1}{EI} \int_0^a \frac{-wx^2}{2} (0) dx + \frac{1}{EI} \int_a^l \left[\frac{-wx^2}{2} + R_B(x - a) \right] (x - a) dx = 0$$

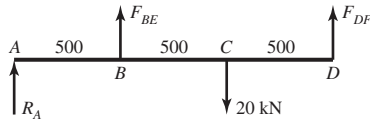
$$-\frac{w}{2} \left[\frac{1}{4} (l^4 - a^4) - \frac{a}{3} (l^3 - a^3) \right] + \frac{R_B}{3} [(l - a)^3 - (a - a)^3] = 0$$

$$R_B = \frac{w}{(l-a)^3} [3(L^4 - a^4) - 4a(l^3 - a^3)] = \frac{w}{8(l-a)} (3l^2 + 2al + a^2) \quad \text{Ans.}$$

$$R_C = wl - R_B = \frac{w}{8(l-a)} (5l^2 - 10al - a^2) \quad \text{Ans.}$$

$$M_C = \frac{wl^2}{2} - R_B(l-a) = \frac{w}{8} (l^2 - 2al - a^2) \quad \text{Ans.}$$

4-61



$$A = \frac{\pi}{4} (0.012^2) = 1.131(10^{-4}) \text{ m}^2$$

$$(1) \quad R_A + F_{BE} + F_{DF} = 20 \text{ kN} \quad (a)$$

$$\sum M_A = 3F_{DF} - 2(20) + F_{BE} = 0$$

$$F_{BE} + 3F_{DF} = 40 \text{ kN} \quad (b)$$

$$(2) \quad M = R_A x + F_{BE} \langle x - 0.5 \rangle^1 - 20(10^3) \langle x - 1 \rangle^1$$

$$EI \frac{dy}{dx} = R_A \frac{x^2}{2} + \frac{F_{BE}}{2} \langle x - 0.5 \rangle^2 - 10(10^3) \langle x - 1 \rangle^2 + C_1$$

$$EI y = R_A \frac{x^3}{6} + \frac{F_{BE}}{6} \langle x - 0.5 \rangle^3 - \frac{10}{3} (10^3) \langle x - 1 \rangle^3 + C_1 x + C_2$$

$$(3) \quad y = 0 \text{ at } x = 0 \quad \therefore C_2 = 0$$

$$y_B = - \left(\frac{Fl}{AE} \right)_{BE} = - \frac{F_{BE}(1)}{1.131(10^{-4})209(10^9)} = -4.2305(10^{-8}) F_{BE}$$

Substituting and evaluating at $x = 0.5 \text{ m}$

$$EI y_B = 209(10^9)(8)(10^{-7})(-4.2305)(10^{-8}) F_{BE} = R_A \frac{0.5^3}{6} + C_1(0.5)$$

$$2.0833(10^{-2}) R_A + 7.0734(10^{-3}) F_{BE} + 0.5 C_1 = 0 \quad (c)$$

$$y_D = - \left(\frac{Fl}{AE} \right)_{DF} = - \frac{F_{DF}(1)}{1.131(10^{-4})(209)(10^9)} = -4.2305(10^{-8}) F_{DF}$$

Substituting and evaluating at $x = 1.5 \text{ m}$

$$EI y_D = -7.0734(10^{-3}) F_{DF} = R_A \frac{1.5^3}{6} + \frac{F_{BE}}{6} (1.5 - 0.5)^3 - \frac{10}{3} (10^3) (1.5 - 1)^3 + 1.5 C_1$$

$$0.5625 R_A + 0.16667 F_{BE} + 7.0734(10^{-3}) F_{DF} + 1.5 C_1 = 416.67 \quad (d)$$

$$\begin{bmatrix} 1 & 1 & 1 & 0 \\ 0 & 1 & 3 & 0 \\ 2.0833(10^{-2}) & 7.0734(10^{-3}) & 0 & 0.5 \\ 0.5625 & 0.16667 & 7.0734(10^{-3}) & 1.5 \end{bmatrix} \begin{Bmatrix} R_A \\ F_{BE} \\ F_{DF} \\ C_1 \end{Bmatrix} = \begin{Bmatrix} 20000 \\ 40000 \\ 0 \\ 416.67 \end{Bmatrix}$$

Solve simultaneously or use software

$$R_A = -3885 \text{ N}, \quad F_{BE} = 15830 \text{ N}, \quad F_{DF} = 8058 \text{ N}, \quad C_1 = -62.045 \text{ N} \cdot \text{m}^2$$

$$\sigma_{BE} = \frac{15830}{(\pi/4)(12^2)} = 140 \text{ MPa} \quad \text{Ans.}, \quad \sigma_{DF} = \frac{8058}{(\pi/4)(12^2)} = 71.2 \text{ MPa} \quad \text{Ans.}$$

$$EI = 209(10^9)(8)(10^{-7}) = 167.2(10^3) \text{ N} \cdot \text{m}^2$$

$$y = \frac{1}{167.2(10^3)} \left[-\frac{3885}{6}x^3 + \frac{15830}{6}(x - 0.5)^3 - \frac{10}{3}(10^3)(x - 1)^3 - 62.045x \right]$$

$$B: x = 0.5 \text{ m}, \quad y_B = -6.70(10^{-4}) \text{ m} = -0.670 \text{ mm} \quad \text{Ans.}$$

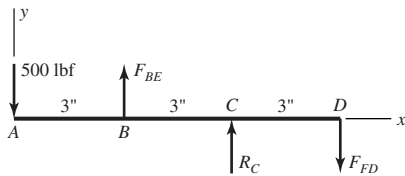
$$C: x = 1 \text{ m}, \quad y_C = \frac{1}{167.2(10^3)} \left[-\frac{3885}{6}(1^3) + \frac{15830}{6}(1 - 0.5)^3 - 62.045(1) \right]$$

$$= -2.27(10^{-3}) \text{ m} = -2.27 \text{ mm} \quad \text{Ans.}$$

$$D: x = 1.5, \quad y_D = \frac{1}{167.2(10^3)} \left[-\frac{3885}{6}(1.5^3) + \frac{15830}{6}(1.5 - 0.5)^3 \right. \\ \left. - \frac{10}{3}(10^3)(1.5 - 1)^3 - 62.045(1.5) \right]$$

$$= -3.39(10^{-4}) \text{ m} = -0.339 \text{ mm} \quad \text{Ans.}$$

4-62



$$EI = 30(10^6)(0.050) = 1.5(10^6) \text{ lbf} \cdot \text{in}^2$$

$$(1) \quad R_C + F_{BE} - F_{FD} = 500 \quad (a)$$

$$3R_C + 6F_{BE} = 9(500) = 4500 \quad (b)$$

$$(2) \quad M = -500x + F_{BE}(x - 3)^1 + R_C(x - 6)^1$$

$$EI \frac{dy}{dx} = -250x^2 + \frac{F_{BE}}{2}(x - 3)^2 + \frac{R_C}{2}(x - 6)^2 + C_1$$

$$EI y = -\frac{250}{3}x^3 + \frac{F_{BE}}{6}(x - 3)^3 + \frac{R_C}{6}(x - 6)^3 + C_1x + C_2$$

$$y_B = \left(\frac{Fl}{AE} \right)_{BE} = -\frac{F_{BE}(2)}{(\pi/4)(5/16)^2(30)(10^6)} = -8.692(10^{-7})F_{BE}$$

Substituting and evaluating at $x = 3$ in

$$EI y_B = 1.5(10^6)[-8.692(10^{-7})F_{BE}] = -\frac{250}{3}(3^3) + 3C_1 + C_2$$

$$1.3038F_{BE} + 3C_1 + C_2 = 2250 \quad (c)$$

Since $y = 0$ at $x = 6$ in

$$EIy|_{x=6} = -\frac{250}{3}(6^3) + \frac{F_{BE}}{6}(6-3)^3 + 6C_1 + C_2$$

$$4.5F_{BE} + 6C_1 + C_2 = 1.8(10^4) \quad (d)$$

$$y_D = \left(\frac{Fl}{AE}\right)_{DF} = \frac{F_{DF}(2.5)}{(\pi/4)(5/16)^2(30)(10^6)} = 1.0865(10^{-6})F_{DF}$$

Substituting and evaluating at $x = 9$ in

$$EIy_D = 1.5(10^6)[1.0865(10^{-6})F_{DF}] = -\frac{250}{3}(9^3) + \frac{F_{BE}}{6}(9-3)^3$$

$$+ \frac{R_C}{6}(9-6)^3 + 9C_1 + C_2$$

$$4.5R_C + 36F_{BE} - 1.6297F_{DF} + 9C_1 + C_2 = 6.075(10^4) \quad (e)$$

$$\begin{bmatrix} 1 & 1 & -1 & 0 & 0 \\ 3 & 6 & 0 & 0 & 0 \\ 0 & 1.3038 & 0 & 3 & 1 \\ 0 & 4.5 & 0 & 6 & 1 \\ 4.5 & 36 & -1.6297 & 9 & 1 \end{bmatrix} \begin{Bmatrix} R_C \\ F_{BE} \\ F_{DF} \\ C_1 \\ C_2 \end{Bmatrix} = \begin{Bmatrix} 500 \\ 4500 \\ 2250 \\ 1.8(10^4) \\ 6.075(10^4) \end{Bmatrix}$$

$$R_C = -590.4 \text{ lbf}, \quad F_{BE} = 1045.2 \text{ lbf}, \quad F_{DF} = -45.2 \text{ lbf}$$

$$C_1 = 4136.4 \text{ lbf} \cdot \text{in}^2, \quad C_2 = -11\,522 \text{ lbf} \cdot \text{in}^3$$

$$\sigma_{BE} = \frac{1045.2}{(\pi/4)(5/16)^2} = 13\,627 \text{ psi} = 13.6 \text{ kpsi} \quad \text{Ans.}$$

$$\sigma_{DF} = -\frac{45.2}{(\pi/4)(5/16)^2} = -589 \text{ psi} \quad \text{Ans.}$$

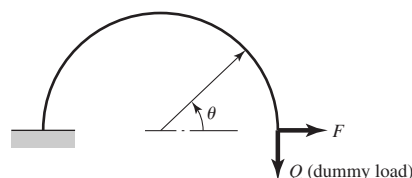
$$y_A = \frac{1}{1.5(10^6)}(-11\,522) = -0.007\,68 \text{ in} \quad \text{Ans.}$$

$$y_B = \frac{1}{1.5(10^6)} \left[-\frac{250}{3}(3^3) + 4136.4(3) - 11\,522 \right] = -0.000\,909 \text{ in} \quad \text{Ans.}$$

$$y_D = \frac{1}{1.5(10^6)} \left[-\frac{250}{3}(9^3) + \frac{1045.2}{6}(9-3)^3 + \frac{-590.4}{6}(9-6)^3 + 4136.4(9) - 11\,522 \right]$$

$$= -4.93(10^{-5}) \text{ in} \quad \text{Ans.}$$

4-63



$$M = -PR \sin \theta + QR(1 - \cos \theta) \quad \frac{\partial M}{\partial Q} = R(1 - \cos \theta)$$

$$\delta_Q = \left. \frac{\partial U}{\partial Q} \right|_{Q=0} = \frac{1}{EI} \int_0^\pi (-PR \sin \theta) R(1 - \cos \theta) R d\theta = -2 \frac{PR^3}{EI}$$

Deflection is upward and equals $2(PR^3/EI)$ Ans.

4-64 Equation (4-28) becomes

$$U = 2 \int_0^\pi \frac{M^2 R d\theta}{2EI} \quad R/h > 10$$

where $M = FR(1 - \cos \theta)$ and $\frac{\partial M}{\partial F} = R(1 - \cos \theta)$

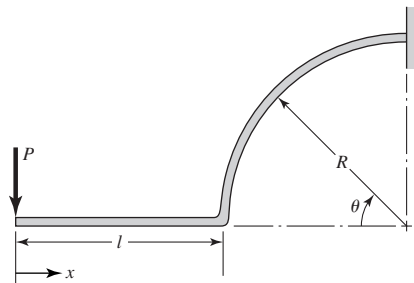
$$\begin{aligned} \delta &= \frac{\partial U}{\partial F} = \frac{2}{EI} \int_0^\pi M \frac{\partial M}{\partial F} R d\theta \\ &= \frac{2}{EI} \int_0^\pi FR^3(1 - \cos \theta)^2 d\theta \\ &= \frac{3\pi FR^3}{EI} \end{aligned}$$

Since $I = bh^3/12 = 4(6)^3/12 = 72 \text{ mm}^4$ and $R = 81/2 = 40.5 \text{ mm}$, we have

$$\delta = \frac{3\pi(40.5)^3 F}{131(72)} = 66.4F \text{ mm} \quad \text{Ans.}$$

where F is in kN.

4-65



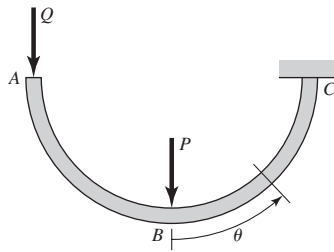
$$M = -Px, \quad \frac{\partial M}{\partial P} = -x \quad 0 \leq x \leq l$$

$$M = Pl + PR(1 - \cos \theta), \quad \frac{\partial M}{\partial P} = l + R(1 - \cos \theta) \quad 0 \leq \theta \leq \pi/2$$

$$\delta_P = \frac{1}{EI} \left\{ \int_0^l -Px(-x) dx + \int_0^{\pi/2} P[l + R(1 - \cos \theta)]^2 R d\theta \right\}$$

$$= \frac{P}{12EI} \{4l^3 + 3R[2\pi l^2 + 4(\pi - 2)lR + (3\pi - 8)R^2]\} \quad \text{Ans.}$$

4-66 A: Dummy load Q is applied at A. Bending in AB due only to Q which is zero.



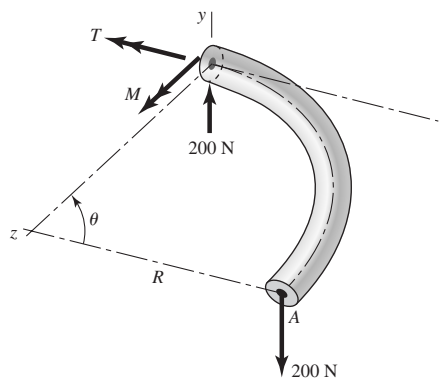
$$M = PR \sin \theta + QR(1 + \sin \theta), \quad \frac{\partial M}{\partial Q} = R(1 + \sin \theta), \quad 0 \leq \theta \leq \frac{\pi}{2}$$

$$\begin{aligned} (\delta_A)_V &= \left. \frac{\partial U}{\partial Q} \right|_{Q=0} = \frac{1}{EI} \int_0^{\pi/2} (PR \sin \theta)[R(1 + \sin \theta)]R d\theta \\ &= \frac{PR^3}{EI} \left(-\cos \theta + \frac{\theta}{2} - \frac{\sin 2\theta}{4} \right) \Big|_0^{\pi/2} = \frac{PR^3}{EI} \left(1 + \frac{\pi}{4} \right) \\ &= \frac{\pi + 4}{4} \frac{PR^3}{EI} \quad \text{Ans.} \end{aligned}$$

$$B: \quad M = PR \sin \theta, \quad \frac{\partial M}{\partial P} = R \sin \theta$$

$$\begin{aligned} (\delta_B)_V &= \frac{\partial U}{\partial P} = \frac{1}{EI} \int_0^{\pi/2} (PR \sin \theta)(R \sin \theta)R d\theta \\ &= \frac{\pi}{4} \frac{PR^3}{EI} \quad \text{Ans.} \end{aligned}$$

4-67



$$M = PR \sin \theta, \quad \frac{\partial M}{\partial P} = R \sin \theta \quad 0 < \theta < \frac{\pi}{2}$$

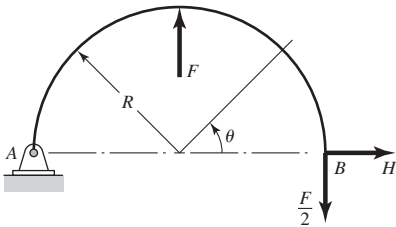
$$T = PR(1 - \cos \theta), \quad \frac{\partial T}{\partial P} = R(1 - \cos \theta)$$

$$(\delta_A)_y = -\frac{\partial U}{\partial P} = -\left\{ \frac{1}{EI} \int_0^{\pi/2} P(R \sin \theta)^2 R d\theta + \frac{1}{GJ} \int_0^{\pi/2} P[R(1 - \cos \theta)]^2 R d\theta \right\}$$

Integrating and substituting $J = 2I$ and $G = E/[2(1 + \nu)]$

$$\begin{aligned} (\delta_A)_y &= -\frac{PR^3}{EI} \left[\frac{\pi}{4} + (1 + \nu) \left(\frac{3\pi}{4} - 2 \right) \right] = -[4\pi - 8 + (3\pi - 8)\nu] \frac{PR^3}{4EI} \\ &= -[4\pi - 8 + (3\pi - 8)(0.29)] \frac{(200)(100)^3}{4(200)(10^3)(\pi/64)(5)^4} = -40.6 \text{ mm} \end{aligned}$$

4-68 Consider the horizontal reaction, to be applied at B, subject to the constraint $(\delta_B)_H = 0$.



$$(a) (\delta_B)_H = \frac{\partial U}{\partial H} = 0$$

Due to symmetry, consider half of the structure. F does not deflect horizontally.

$$M = \frac{FR}{2}(1 - \cos \theta) - HR \sin \theta, \quad \frac{\partial M}{\partial H} = -R \sin \theta, \quad 0 < \theta < \frac{\pi}{2}$$

$$\frac{\partial U}{\partial H} = \frac{1}{EI} \int_0^{\pi/2} \left[\frac{FR}{2}(1 - \cos \theta) - HR \sin \theta \right] (-R \sin \theta) R d\theta = 0$$

$$-\frac{F}{2} + \frac{F}{4} + H \frac{\pi}{4} = 0 \quad \Rightarrow \quad H = \frac{F}{\pi} \quad \text{Ans.}$$

Reaction at A is the same where H goes to the left

$$(b) \text{ For } 0 < \theta < \frac{\pi}{2}, \quad M = \frac{FR}{2}(1 - \cos \theta) - \frac{FR}{\pi} \sin \theta$$

$$M = \frac{FR}{2\pi} [\pi(1 - \cos \theta) - 2 \sin \theta] \quad \text{Ans.}$$

Due to symmetry, the solution for the left side is identical.

$$(c) \quad \frac{\partial M}{\partial F} = \frac{R}{2\pi} [\pi(1 - \cos \theta) - 2 \sin \theta]$$

$$\delta_F = \frac{\partial U}{\partial F} = \frac{2}{EI} \int_0^{\pi/2} \frac{FR^2}{4\pi^2} [\pi(1 - \cos \theta) - 2 \sin \theta]^2 R d\theta$$

$$= \frac{FR^3}{2\pi^2 EI} \int_0^{\pi/2} (\pi^2 + \pi^2 \cos^2 \theta + 4 \sin^2 \theta - 2\pi^2 \cos \theta - 4\pi \sin \theta + 4\pi \sin \theta \cos \theta) d\theta$$

$$= \frac{FR^3}{2\pi^2 EI} \left[\pi^2 \left(\frac{\pi}{2} \right) + \pi^2 \left(\frac{\pi}{4} \right) + 4 \left(\frac{\pi}{4} \right) - 2\pi^2 - 4\pi + 2\pi \right]$$

$$= \frac{(3\pi^2 - 8\pi - 4) FR^3}{8\pi EI} \quad \text{Ans.}$$

4-69 Must use Eq. (4-33)

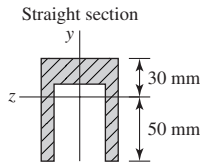
$$A = 80(60) - 40(60) = 2400 \text{ mm}^2$$

$$R = \frac{(25 + 40)(80)(60) - (25 + 20 + 30)(40)(60)}{2400} = 55 \text{ mm}$$

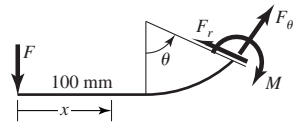
Section is equivalent to the "T" section of Table 3-4

$$r_n = \frac{60(20) + 20(60)}{60 \ln[(25 + 20)/25] + 20 \ln[(80 + 25)/(25 + 20)]} = 45.9654 \text{ mm}$$

$$e = R - r_n = 9.035 \text{ mm}$$



$$I_z = \frac{1}{12}(60)(20^3) + 60(20)(30 - 10)^2 + 2 \left[\frac{1}{12}(10)(60^3) + 10(60)(50 - 30)^2 \right] = 1.36(10^6) \text{ mm}^4$$



For $0 \leq x \leq 100 \text{ mm}$

$$M = -Fx, \quad \frac{\partial M}{\partial F} = -x; \quad V = F, \quad \frac{\partial V}{\partial F} = 1$$

For $\theta \leq \pi/2$

$$F_r = F \cos \theta, \quad \frac{\partial F_r}{\partial F} = \cos \theta; \quad F_\theta = F \sin \theta, \quad \frac{\partial F_\theta}{\partial F} = \sin \theta$$

$$M = F(100 + 55 \sin \theta), \quad \frac{\partial M}{\partial F} = (100 + 55 \sin \theta)$$

Use Eq. (5-34), integrate from 0 to $\pi/2$, double the results and add straight part

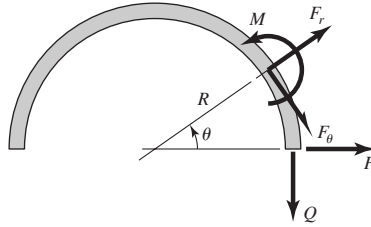
$$\begin{aligned} \delta = \frac{2}{E} \left\{ \frac{1}{I} \int_0^{100} Fx^2 dx + \int_0^{100} \frac{(1)F(1) dx}{2400(G/E)} + \int_0^{\pi/2} F \frac{(100 + 55 \sin \theta)^2}{2400(9.035)} d\theta \right. \\ \left. + \int_0^{\pi/2} \frac{F \sin^2 \theta (55)}{2400} d\theta - \int_0^{\pi/2} \frac{F(100 + 55 \sin \theta)}{2400} \sin \theta d\theta \right. \\ \left. - \int_0^{\pi/2} \frac{F \sin \theta (100 + 55 \sin \theta)}{2400} d\theta + \int_0^{\pi/2} \frac{(1)F \cos^2 \theta (55)}{2400(G/E)} d\theta \right\} \end{aligned}$$

Substitute

$$I = 1.36(10^3) \text{ mm}^2, \quad F = 30(10^3) \text{ N}, \quad E = 207(10^3) \text{ N/mm}^2, \quad G = 79(10^3) \text{ N/mm}^2$$

$$\begin{aligned} \delta = \frac{2}{207(10^3)} 30(10^3) \left\{ \frac{100^3}{3(1.36)(10^6)} + \frac{207}{79} \left(\frac{100}{2400} \right) + \frac{2.908(10^4)}{2400(9.035)} + \frac{55}{2400} \left(\frac{\pi}{4} \right) \right. \\ \left. - \frac{2}{2400}(143.197) + \frac{207}{79} \left(\frac{55}{2400} \right) \left(\frac{\pi}{4} \right) \right\} = 0.476 \text{ mm} \quad \text{Ans.} \end{aligned}$$

4-70



$$M = FR \sin \theta - QR(1 - \cos \theta), \quad \frac{\partial M}{\partial Q} = -R(1 - \cos \theta)$$

$$F_\theta = Q \cos \theta + F \sin \theta, \quad \frac{\partial F_\theta}{\partial Q} = \cos \theta$$

$$\begin{aligned} \frac{\partial}{\partial Q}(MF_\theta) &= [FR \sin \theta - QR(1 - \cos \theta)] \cos \theta \\ &\quad + [-R(1 - \cos \theta)][Q \cos \theta + F \sin \theta] \end{aligned}$$

$$F_r = F \cos \theta - Q \sin \theta, \quad \frac{\partial F_r}{\partial Q} = -\sin \theta$$

From Eq. (4-33)

$$\begin{aligned} \delta = \frac{\partial U}{\partial Q} \Big|_{Q=0} &= \frac{1}{AeE} \int_0^\pi (FR \sin \theta)[-R(1 - \cos \theta)] d\theta + \frac{R}{AE} \int_0^\pi F \sin \theta \cos \theta d\theta \\ &\quad - \frac{1}{AE} \int_0^\pi [FR \sin \theta \cos \theta - FR \sin \theta(1 - \cos \theta)] d\theta \\ &\quad + \frac{CR}{AG} \int_0^\pi -F \cos \theta \sin \theta d\theta \\ &= -\frac{2FR^2}{AeE} + 0 + \frac{2FR}{AE} + 0 = -\left(\frac{R}{e} - 1\right) \frac{2FR}{AE} \quad \text{Ans.} \end{aligned}$$

4-71 The cross section at A does not rotate, thus for a single quadrant we have

$$\frac{\partial U}{\partial M_A} = 0$$

The bending moment at an angle θ to the x axis is

$$M = M_A - \frac{F}{2}(R - x) = M_A - \frac{FR}{2}(1 - \cos \theta) \quad (1)$$

because $x = R \cos \theta$. Next,

$$U = \int \frac{M^2}{2EI} ds = \int_0^{\pi/2} \frac{M^2}{2EI} R d\theta$$

since $ds = R d\theta$. Then

$$\frac{\partial U}{\partial M_A} = \frac{R}{EI} \int_0^{\pi/2} M \frac{\partial M}{\partial M_A} d\theta = 0$$

But $\partial M / \partial M_A = 1$. Therefore

$$\int_0^{\pi/2} M d\theta = \int_0^{\pi/2} \left[M_A - \frac{FR}{2}(1 - \cos\theta) \right] d\theta = 0$$

Since this term is zero, we have

$$M_A = \frac{FR}{2} \left(1 - \frac{2}{\pi} \right)$$

Substituting into Eq. (1)

$$M = \frac{FR}{2} \left(\cos\theta - \frac{2}{\pi} \right)$$

The maximum occurs at B where $\theta = \pi/2$. It is

$$M_B = -\frac{FR}{\pi} \quad \text{Ans.}$$

4-72 For one quadrant

$$M = \frac{FR}{2} \left(\cos\theta - \frac{2}{\pi} \right); \quad \frac{\partial M}{\partial F} = \frac{R}{2} \left(\cos\theta - \frac{2}{\pi} \right)$$

$$\begin{aligned} \delta &= \frac{\partial U}{\partial F} = 4 \int_0^{\pi/2} \frac{M}{EI} \frac{\partial M}{\partial F} R d\theta \\ &= \frac{FR^3}{EI} \int_0^{\pi/2} \left(\cos\theta - \frac{2}{\pi} \right)^2 d\theta \\ &= \frac{FR^3}{EI} \left(\frac{\pi}{4} - \frac{2}{\pi} \right) \quad \text{Ans.} \end{aligned}$$

4-73

$$P_{cr} = \frac{C\pi^2 EI}{l^2}$$

$$I = \frac{\pi}{64}(D^4 - d^4) = \frac{\pi D^4}{64}(1 - K^4)$$

$$P_{cr} = \frac{C\pi^2 E}{l^2} \left[\frac{\pi D^4}{64}(1 - K^4) \right]$$

$$D = \left[\frac{64 P_{cr} l^2}{\pi^3 C E (1 - K^4)} \right]^{1/4} \quad \text{Ans.}$$

4-74

$$A = \frac{\pi}{4}D^2(1 - K^2), \quad I = \frac{\pi}{64}D^4(1 - K^4) = \frac{\pi}{64}D^4(1 - K^2)(1 + K^2),$$

$$k^2 = \frac{I}{A} = \frac{D^2}{16}(1 + K^2)$$

From Eq. (4-43)

$$\frac{P_{cr}}{(\pi/4)D^2(1 - K^2)} = S_y - \frac{S_y^2 l^2}{4\pi^2 k^2 CE} = S_y - \frac{S_y^2 l^2}{4\pi^2 (D^2/16)(1 + K^2)CE}$$

$$4P_{cr} = \pi D^2(1 - K^2)S_y - \frac{4S_y^2 l^2 \pi D^2(1 - K^2)}{\pi^2 D^2(1 + K^2)CE}$$

$$\pi D^2(1 - K^2)S_y = 4P_{cr} + \frac{4S_y^2 l^2(1 - K^2)}{\pi(1 + K^2)CE}$$

$$D = \left[\frac{4P_{cr}}{\pi S_y(1 - K^2)} + \frac{4S_y^2 l^2(1 - K^2)}{\pi(1 + K^2)CE\pi(1 - K^2)S_y} \right]^{1/2}$$

$$= 2 \left[\frac{P_{cr}}{\pi S_y(1 - K^2)} + \frac{S_y l^2}{\pi^2 CE(1 + K^2)} \right]^{1/2} \quad \text{Ans.}$$

4-75 (a)

$$\sum M_A = 0, \quad 2.5(180) - \frac{3}{\sqrt{3^2 + 1.75^2}} F_{BO}(1.75) = 0 \Rightarrow F_{BO} = 297.7 \text{ lbf}$$

Using $n_d = 5$, design for $F_{cr} = n_d F_{BO} = 5(297.7) = 1488 \text{ lbf}$, $l = \sqrt{3^2 + 1.75^2} = 3.473 \text{ ft}$, $S_y = 24 \text{ kpsi}$

In plane: $k = 0.2887h = 0.2887''$, $C = 1.0$

Try $1'' \times 1/2''$ section

$$\frac{l}{k} = \frac{3.473(12)}{0.2887} = 144.4$$

$$\left(\frac{l}{k}\right)_1 = \left(\frac{2\pi^2(1)(30)(10^6)}{24(10^3)}\right)^{1/2} = 157.1$$

Since $(l/k)_1 > (l/k)$ use Johnson formula

$$P_{cr} = (1) \left(\frac{1}{2}\right) \left[24(10^3) - \left(\frac{24(10^3)}{2\pi} 144.4\right)^2 \left(\frac{1}{1(30)(10^6)}\right) \right] = 6930 \text{ lbf}$$

Try $1'' \times 1/4''$: $P_{cr} = 3465 \text{ lbf}$

Out of plane: $k = 0.2887(0.5) = 0.1444$ in, $C = 1.2$

$$\frac{l}{k} = \frac{3.473(12)}{0.1444} = 289$$

Since $(l/k)_1 < (l/k)$ use Euler equation

$$P_{cr} = 1(0.5) \frac{1.2(\pi^2)(30)(10^6)}{289^2} = 2127 \text{ lbf}$$

1/4" increases l/k by 2, $\left(\frac{l}{k}\right)^2$ by 4, and A by 1/2

Try 1" \times 3/8": $k = 0.2887(0.375) = 0.1083$ in

$$\frac{l}{k} = 385, \quad P_{cr} = 1(0.375) \frac{1.2(\pi^2)(30)(10^6)}{385^2} = 899 \text{ lbf} \quad (\text{too low})$$

Use 1" \times 1/2" *Ans.*

$$(b) \quad \sigma_b = -\frac{P}{\pi dl} = -\frac{298}{\pi(0.5)(0.5)} = -379 \text{ psi} \quad \text{No, bearing stress is not significant.}$$

4-76 This is a design problem with no one distinct solution.

4-77

$$F = 800 \left(\frac{\pi}{4}\right) (3^2) = 5655 \text{ lbf}, \quad S_y = 37.5 \text{ kpsi}$$

$$P_{cr} = n_d F = 3(5655) = 17\,000 \text{ lbf}$$

(a) Assume Euler with $C = 1$

$$I = \frac{\pi}{64} d^4 = \frac{P_{cr} l^2}{C \pi^2 E} \Rightarrow d = \left[\frac{64 P_{cr} l^2}{\pi^3 C E} \right]^{1/4} = \left[\frac{64(17)(10^3)(60^2)}{\pi^3(1)(30)(10^6)} \right]^{1/4} = 1.433 \text{ in}$$

Use $d = 1.5$ in; $k = d/4 = 0.375$

$$\frac{l}{k} = \frac{60}{0.375} = 160$$

$$\left(\frac{l}{k}\right)_1 = \left(\frac{2\pi^2(1)(30)(10^6)}{37.5(10^3)}\right)^{1/2} = 126 \quad \therefore \text{use Euler}$$

$$P_{cr} = \frac{\pi^2(30)(10^6)(\pi/64)(1.5^4)}{60^2} = 20\,440 \text{ lbf}$$

$d = 1.5$ in is satisfactory. *Ans.*

$$(b) \quad d = \left[\frac{64(17)(10^3)(18^2)}{\pi^3(1)(30)(10^6)} \right]^{1/4} = 0.785 \text{ in}, \quad \text{so use } 0.875 \text{ in}$$

$$k = \frac{0.875}{4} = 0.2188 \text{ in}$$

$$l/k = \frac{18}{0.2188} = 82.3 \quad \text{try Johnson}$$

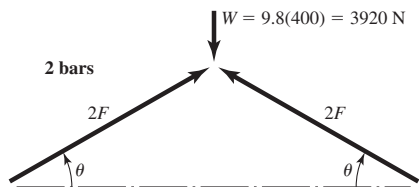
$$P_{cr} = \frac{\pi}{4}(0.875^2) \left[37.5(10^3) - \left(\frac{37.5(10^3)}{2\pi} 82.3 \right)^2 \frac{1}{1(30)(10^6)} \right] = 17714 \text{ lbf}$$

Use $d = 0.875 \text{ in}$ Ans.

$$(c) \quad n_{(a)} = \frac{20440}{5655} = 3.61 \quad \text{Ans.}$$

$$n_{(b)} = \frac{17714}{5655} = 3.13 \quad \text{Ans.}$$

4-78



$$4F \sin \theta = 3920$$

$$F = \frac{3920}{4 \sin \theta}$$

In range of operation, F is maximum when $\theta = 15^\circ$

$$F_{\max} = \frac{3920}{4 \sin 15} = 3786 \text{ N per bar}$$

$$P_{cr} = n_d F_{\max} = 2.5(3786) = 9465 \text{ N}$$

$l = 300 \text{ mm}$, $h = 25 \text{ mm}$

Try $b = 5 \text{ mm}$: out of plane $k = (5/\sqrt{12}) = 1.443 \text{ mm}$

$$\frac{l}{k} = \frac{300}{1.443} = 207.8$$

$$\left(\frac{l}{k} \right)_1 = \left[\frac{(2\pi^2)(1.4)(207)(10^9)}{380(10^6)} \right]^{1/2} = 123 \quad \therefore \text{use Euler}$$

$$P_{cr} = (25)(5) \frac{(1.4\pi^2)(207)(10^3)}{(207.8)^2} = 8280 \text{ N}$$

Try: 5.5 mm : $k = 5.5/\sqrt{12} = 1.588 \text{ mm}$

$$\frac{l}{k} = \frac{300}{1.588} = 189$$

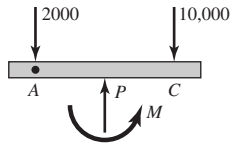
$$P_{cr} = 25(5.5) \frac{(1.4\pi^2)(207)(10^3)}{189^2} = 11010 \text{ N}$$

Use 25×5.5 mm bars *Ans.* The factor of safety is thus

$$n = \frac{11\,010}{3786} = 2.91 \quad \text{Ans.}$$

4-79 $\sum F = 0 = 2000 + 10\,000 - P \Rightarrow P = 12\,000 \text{ lbf} \quad \text{Ans.}$

$$\sum M_A = 12\,000 \left(\frac{5.68}{2} \right) - 10\,000(5.68) + M = 0$$



$$M = 22\,720 \text{ lbf} \cdot \text{in}$$

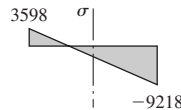
$$e = \frac{M}{P} = \frac{22\,720}{12\,000} = 1.893 \text{ in} \quad \text{Ans.}$$

From Table A-8, $A = 4.271 \text{ in}^2$, $I = 7.090 \text{ in}^4$

$$k^2 = \frac{I}{A} = \frac{7.090}{4.271} = 1.66 \text{ in}^2$$

$$\sigma_c = -\frac{12\,000}{4.271} \left[1 + \frac{1.893(2)}{1.66} \right] = -9218 \text{ psi} \quad \text{Ans.}$$

$$\sigma_t = -\frac{12\,000}{4.271} \left[1 - \frac{1.893(2)}{1.66} \right] = 3598 \text{ psi}$$

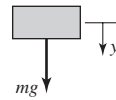


4-80 This is a design problem so the solutions will differ.

4-81 For free fall with $y \leq h$

$$\sum F_y - m\ddot{y} = 0$$

$$mg - m\ddot{y} = 0, \quad \text{so } \ddot{y} = g$$



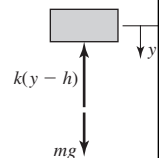
Using $y = a + bt + ct^2$, we have at $t = 0$, $y = 0$, and $\dot{y} = 0$, and so $a = 0$, $b = 0$, and $c = g/2$. Thus

$$y = \frac{1}{2}gt^2 \quad \text{and} \quad \dot{y} = gt \quad \text{for } y \leq h$$

At impact, $y = h$, $t = (2h/g)^{1/2}$, and $v_0 = (2gh)^{1/2}$

After contact, the differential equation (D.E.) is

$$mg - k(y - h) - m\ddot{y} = 0 \quad \text{for } y > h$$



Now let $x = y - h$; then $\dot{x} = \dot{y}$ and $\ddot{x} = \ddot{y}$. So the D.E. is $\ddot{x} + (k/m)x = g$ with solution $\omega = (k/m)^{1/2}$ and

$$x = A \cos \omega t' + B \sin \omega t' + \frac{mg}{k}$$

At contact, $t' = 0$, $x = 0$, and $\dot{x} = v_0$. Evaluating A and B then yields

$$x = -\frac{mg}{k} \cos \omega t' + \frac{v_0}{\omega} \sin \omega t' + \frac{mg}{k}$$

or

$$y = -\frac{W}{k} \cos \omega t' + \frac{v_0}{\omega} \sin \omega t' + \frac{W}{k} + h$$

and

$$\dot{y} = \frac{W\omega}{k} \sin \omega t' + v_0 \cos \omega t'$$

To find y_{\max} set $\dot{y} = 0$. Solving gives

$$\tan \omega t' = -\frac{v_0 k}{W\omega}$$

or

$$(\omega t')^* = \tan^{-1} \left(-\frac{v_0 k}{W\omega} \right)$$

The first value of $(\omega t')^*$ is a minimum and negative. So add π radians to it to find the maximum.

Numerical example: $h = 1$ in, $W = 30$ lbf, $k = 100$ lbf/in. Then

$$\omega = (k/m)^{1/2} = [100(386)/30]^{1/2} = 35.87 \text{ rad/s}$$

$$W/k = 30/100 = 0.3$$

$$v_0 = (2gh)^{1/2} = [2(386)(1)]^{1/2} = 27.78 \text{ in/s}$$

Then

$$y = -0.3 \cos 35.87t' + \frac{27.78}{35.87} \sin 35.87t' + 0.3 + 1$$

For y_{\max}

$$\tan \omega t' = -\frac{v_0 k}{W\omega} = -\frac{27.78(100)}{30(35.87)} = -2.58$$

$$(\omega t')^* = -1.20 \text{ rad (minimum)}$$

$$(\omega t')^* = -1.20 + \pi = 1.940 \text{ (maximum)}$$

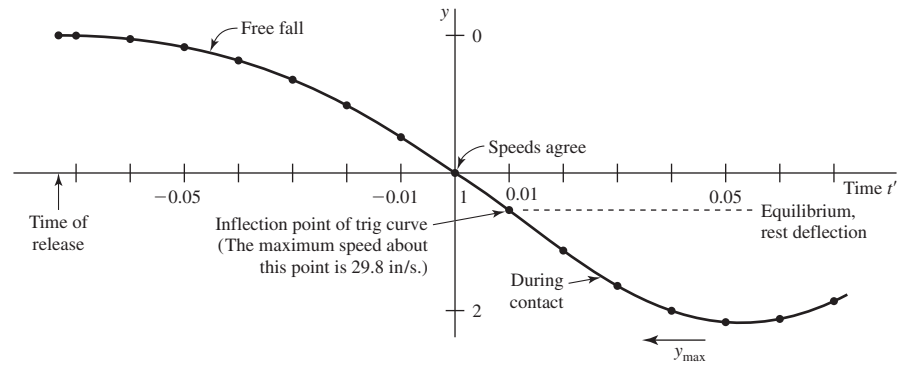
Then $t'^* = 1.940/35.87 = 0.0541$ s. This means that the spring bottoms out at t'^* seconds.

Then $(\omega t')^* = 35.87(0.0541) = 1.94$ rad

$$\text{So } y_{\max} = -0.3 \cos 1.94 + \frac{27.78}{35.87} \sin 1.94 + 0.3 + 1 = 2.130 \text{ in } \textit{Ans.}$$

The maximum spring force is $F_{\max} = k(y_{\max} - h) = 100(2.130 - 1) = 113$ lbf *Ans.*

The action is illustrated by the graph below. *Applications:* Impact, such as a dropped package or a pogo stick with a passive rider. The idea has also been used for a one-legged robotic walking machine.

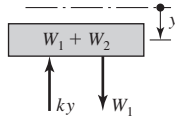


4-82 Choose $t' = 0$ at the instant of impact. At this instant, $v_1 = (2gh)^{1/2}$. Using momentum, $m_1 v_1 = m_2 v_2$. Thus

$$\frac{W_1}{g}(2gh)^{1/2} = \frac{W_1 + W_2}{g}v_2$$

$$v_2 = \frac{W_1(2gh)^{1/2}}{W_1 + W_2}$$

Therefore at $t' = 0$, $y = 0$, and $\dot{y} = v_2$



$$\text{Let } W = W_1 + W_2$$

Because the spring force at $y = 0$ includes a reaction to W_2 , the D.E. is

$$\frac{W}{g}\ddot{y} = -ky + W_1$$

With $\omega = (kg/W)^{1/2}$ the solution is

$$y = A \cos \omega t' + B \sin \omega t' + W_1/k$$

$$\dot{y} = -A\omega \sin \omega t' + B\omega \cos \omega t'$$

$$\text{At } t' = 0, y = 0 \Rightarrow A = -W_1/k$$

$$\text{At } t' = 0, \dot{y} = v_2 \Rightarrow v_2 = B\omega$$

Then

$$B = \frac{v_2}{\omega} = \frac{W_1(2gh)^{1/2}}{(W_1 + W_2)[kg/(W_1 + W_2)]^{1/2}}$$

We now have

$$y = -\frac{W_1}{k} \cos \omega t' + W_1 \left[\frac{2h}{k(W_1 + W_2)} \right]^{1/2} \sin \omega t' + \frac{W_1}{k}$$

Transforming gives

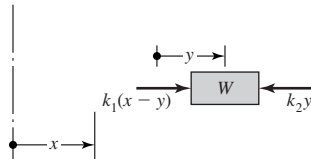
$$y = \frac{W_1}{k} \left(\frac{2hk}{W_1 + W_2} + 1 \right)^{1/2} \cos(\omega t' - \phi) + \frac{W_1}{k}$$

where ϕ is a phase angle. The maximum deflection of W_2 and the maximum spring force are thus

$$y_{\max} = \frac{W_1}{k} \left(\frac{2hk}{W_1 + W_2} + 1 \right)^{1/2} + \frac{W_1}{k} \quad \text{Ans.}$$

$$F_{\max} = ky_{\max} + W_2 = W_1 \left(\frac{2hk}{W_1 + W_2} + 1 \right)^{1/2} + W_1 + W_2 \quad \text{Ans.}$$

4-83 Assume $x > y$ to get a free-body diagram.



Then

$$\frac{W}{g} \ddot{y} = k_1(x - y) - k_2y$$

A particular solution for $x = a$ is

$$y = \frac{k_1a}{k_1 + k_2}$$

Then the complementary plus the particular solution is

$$y = A \cos \omega t + B \sin \omega t + \frac{k_1a}{k_1 + k_2}$$

where

$$\omega = \left[\frac{(k_1 + k_2)g}{W} \right]^{1/2}$$

At $t = 0$, $y = 0$, and $\dot{y} = 0$. Therefore $B = 0$ and

$$A = -\frac{k_1a}{k_1 + k_2}$$

Substituting,

$$y = \frac{k_1a}{k_1 + k_2} (1 - \cos \omega t)$$

Since y is maximum when the cosine is -1

$$y_{\max} = \frac{2k_1a}{k_1 + k_2} \quad \text{Ans.}$$

Chapter 5

5-1

MSS: $\sigma_1 - \sigma_3 = S_y/n \Rightarrow n = \frac{S_y}{\sigma_1 - \sigma_3}$

DE: $n = \frac{S_y}{\sigma'}$

$$\sigma' = (\sigma_A^2 - \sigma_A\sigma_B + \sigma_B^2)^{1/2} = (\sigma_x^2 - \sigma_x\sigma_y + \sigma_y^2 + 3\tau_{xy}^2)^{1/2}$$

(a) MSS: $\sigma_1 = 12, \sigma_2 = 6, \sigma_3 = 0$ kpsi

$$n = \frac{50}{12} = 4.17 \quad \text{Ans.}$$

DE: $\sigma' = (12^2 - 6(12) + 6^2)^{1/2} = 10.39$ kpsi, $n = \frac{50}{10.39} = 4.81$ Ans.

(b) $\sigma_A, \sigma_B = \frac{12}{2} \pm \sqrt{\left(\frac{12}{2}\right)^2 + (-8)^2} = 16, -4$ kpsi

$\sigma_1 = 16, \sigma_2 = 0, \sigma_3 = -4$ kpsi

MSS: $n = \frac{50}{16 - (-4)} = 2.5$ Ans.

DE: $\sigma' = (12^2 + 3(-8^2))^{1/2} = 18.33$ kpsi, $n = \frac{50}{18.33} = 2.73$ Ans.

(c) $\sigma_A, \sigma_B = \frac{-6 - 10}{2} \pm \sqrt{\left(\frac{-6 + 10}{2}\right)^2 + (-5)^2} = -2.615, -13.385$ kpsi

$\sigma_1 = 0, \sigma_2 = -2.615, \sigma_3 = -13.385$ kpsi

MSS: $n = \frac{50}{0 - (-13.385)} = 3.74$ Ans.

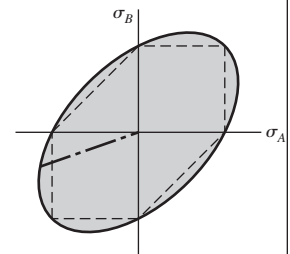
DE: $\sigma' = [(-6)^2 - (-6)(-10) + (-10)^2 + 3(-5)^2]^{1/2}$
 $= 12.29$ kpsi
 $n = \frac{50}{12.29} = 4.07$ Ans.

(d) $\sigma_A, \sigma_B = \frac{12 + 4}{2} \pm \sqrt{\left(\frac{12 - 4}{2}\right)^2 + 1^2} = 12.123, 3.877$ kpsi

$\sigma_1 = 12.123, \sigma_2 = 3.877, \sigma_3 = 0$ kpsi

MSS: $n = \frac{50}{12.123 - 0} = 4.12$ Ans.

DE: $\sigma' = [12^2 - 12(4) + 4^2 + 3(1^2)]^{1/2} = 10.72$ kpsi
 $n = \frac{50}{10.72} = 4.66$ Ans.



5-2 $S_y = 50$ kpsi

$$\text{MSS: } \sigma_1 - \sigma_3 = S_y/n \Rightarrow n = \frac{S_y}{\sigma_1 - \sigma_3}$$

$$\text{DE: } (\sigma_A^2 - \sigma_A\sigma_B + \sigma_B^2)^{1/2} = S_y/n \Rightarrow n = S_y / (\sigma_A^2 - \sigma_A\sigma_B + \sigma_B^2)^{1/2}$$

$$\text{(a) MSS: } \sigma_1 = 12 \text{ kpsi, } \sigma_3 = 0, n = \frac{50}{12 - 0} = 4.17 \text{ Ans.}$$

$$\text{DE: } n = \frac{50}{[12^2 - (12)(12) + 12^2]^{1/2}} = 4.17 \text{ Ans.}$$

$$\text{(b) MSS: } \sigma_1 = 12 \text{ kpsi, } \sigma_3 = 0, n = \frac{50}{12} = 4.17 \text{ Ans.}$$

$$\text{DE: } n = \frac{50}{[12^2 - (12)(6) + 6^2]^{1/2}} = 4.81 \text{ Ans.}$$

$$\text{(c) MSS: } \sigma_1 = 12 \text{ kpsi, } \sigma_3 = -12 \text{ kpsi, } n = \frac{50}{12 - (-12)} = 2.08 \text{ Ans.}$$

$$\text{DE: } n = \frac{50}{[12^2 - (12)(-12) + (-12)^2]^{1/2}} = 2.41 \text{ Ans.}$$

$$\text{(d) MSS: } \sigma_1 = 0, \sigma_3 = -12 \text{ kpsi, } n = \frac{50}{-(-12)} = 4.17 \text{ Ans.}$$

$$\text{DE: } n = \frac{50}{[(-6)^2 - (-6)(-12) + (-12)^2]^{1/2}} = 4.81$$

5-3 $S_y = 390$ MPa

$$\text{MSS: } \sigma_1 - \sigma_3 = S_y/n \Rightarrow n = \frac{S_y}{\sigma_1 - \sigma_3}$$

$$\text{DE: } (\sigma_A^2 - \sigma_A\sigma_B + \sigma_B^2)^{1/2} = S_y/n \Rightarrow n = S_y / (\sigma_A^2 - \sigma_A\sigma_B + \sigma_B^2)^{1/2}$$

$$\text{(a) MSS: } \sigma_1 = 180 \text{ MPa, } \sigma_3 = 0, n = \frac{390}{180} = 2.17 \text{ Ans.}$$

$$\text{DE: } n = \frac{390}{[180^2 - 180(100) + 100^2]^{1/2}} = 2.50 \text{ Ans.}$$

$$\text{(b) } \sigma_A, \sigma_B = \frac{180}{2} \pm \sqrt{\left(\frac{180}{2}\right)^2 + 100^2} = 224.5, -44.5 \text{ MPa} = \sigma_1, \sigma_3$$

$$\text{MSS: } n = \frac{390}{224.5 - (-44.5)} = 1.45 \text{ Ans.}$$

$$\text{DE: } n = \frac{390}{[180^2 + 3(100^2)]^{1/2}} = 1.56 \text{ Ans.}$$

$$(c) \sigma_A, \sigma_B = -\frac{160}{2} \pm \sqrt{\left(-\frac{160}{2}\right)^2 + 100^2} = 48.06, -208.06 \text{ MPa} = \sigma_1, \sigma_3$$

$$\text{MSS: } n = \frac{390}{48.06 - (-208.06)} = 1.52 \text{ Ans.}$$

$$\text{DE: } n = \frac{390}{[-160^2 + 3(100^2)]^{1/2}} = 1.65 \text{ Ans.}$$

$$(d) \sigma_A, \sigma_B = 150, -150 \text{ MPa} = \sigma_1, \sigma_3$$

$$\text{MSS: } n = \frac{390}{150 - (-150)} = 1.30 \text{ Ans.}$$

$$\text{DE: } n = \frac{390}{[3(150)^2]^{1/2}} = 1.50 \text{ Ans.}$$

5-4 $S_y = 220 \text{ MPa}$

$$(a) \sigma_1 = 100, \sigma_2 = 80, \sigma_3 = 0 \text{ MPa}$$

$$\text{MSS: } n = \frac{220}{100 - 0} = 2.20 \text{ Ans.}$$

$$\text{DET: } \sigma' = [100^2 - 100(80) + 80^2]^{1/2} = 91.65 \text{ MPa}$$

$$n = \frac{220}{91.65} = 2.40 \text{ Ans.}$$

$$(b) \sigma_1 = 100, \sigma_2 = 10, \sigma_3 = 0 \text{ MPa}$$

$$\text{MSS: } n = \frac{220}{100} = 2.20 \text{ Ans.}$$

$$\text{DET: } \sigma' = [100^2 - 100(10) + 10^2]^{1/2} = 95.39 \text{ MPa}$$

$$n = \frac{220}{95.39} = 2.31 \text{ Ans.}$$

$$(c) \sigma_1 = 100, \sigma_2 = 0, \sigma_3 = -80 \text{ MPa}$$

$$\text{MSS: } n = \frac{220}{100 - (-80)} = 1.22 \text{ Ans.}$$

$$\text{DE: } \sigma' = [100^2 - 100(-80) + (-80)^2]^{1/2} = 156.2 \text{ MPa}$$

$$n = \frac{220}{156.2} = 1.41 \text{ Ans.}$$

$$(d) \sigma_1 = 0, \sigma_2 = -80, \sigma_3 = -100 \text{ MPa}$$

$$\text{MSS: } n = \frac{220}{0 - (-100)} = 2.20 \text{ Ans.}$$

$$\text{DE: } \sigma' = [(-80)^2 - (-80)(-100) + (-100)^2]^{1/2} = 91.65 \text{ MPa}$$

$$n = \frac{220}{91.65} = 2.40 \text{ Ans.}$$

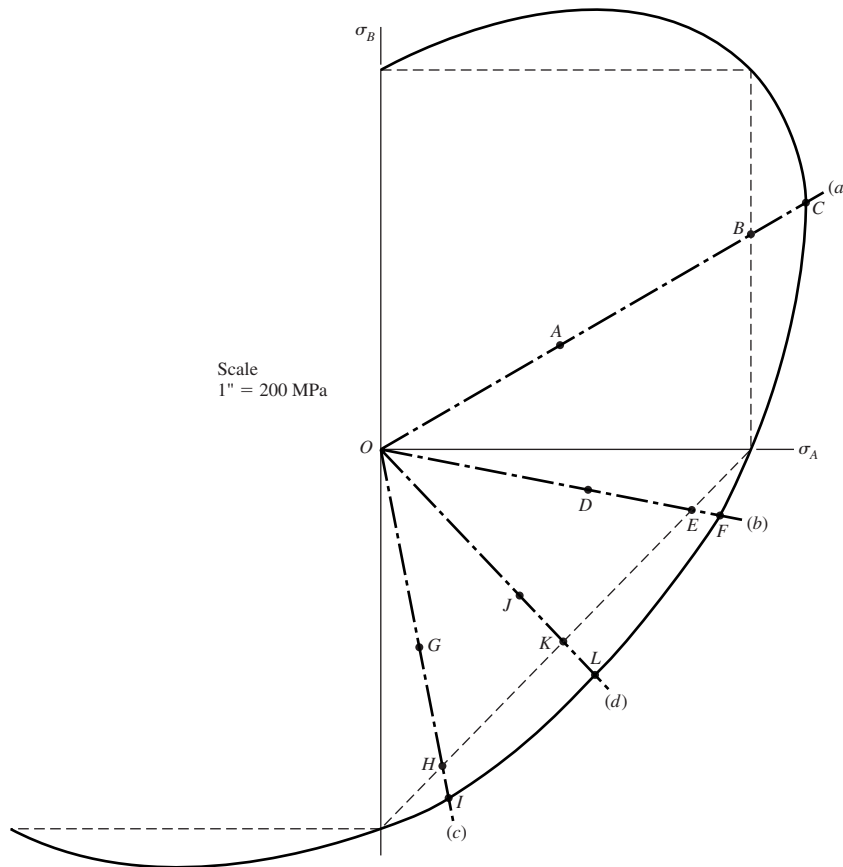
5-5

(a) MSS: $n = \frac{OB}{OA} = \frac{2.23}{1.08} = 2.1$

DE: $n = \frac{OC}{OA} = \frac{2.56}{1.08} = 2.4$

(b) MSS: $n = \frac{OE}{OD} = \frac{1.65}{1.10} = 1.5$

DE: $n = \frac{OF}{OD} = \frac{1.8}{1.1} = 1.6$



(c) MSS: $n = \frac{OH}{OG} = \frac{1.68}{1.05} = 1.6$

DE: $n = \frac{OI}{OG} = \frac{1.85}{1.05} = 1.8$

(d) MSS: $n = \frac{OK}{OJ} = \frac{1.38}{1.05} = 1.3$

DE: $n = \frac{OL}{OJ} = \frac{1.62}{1.05} = 1.5$

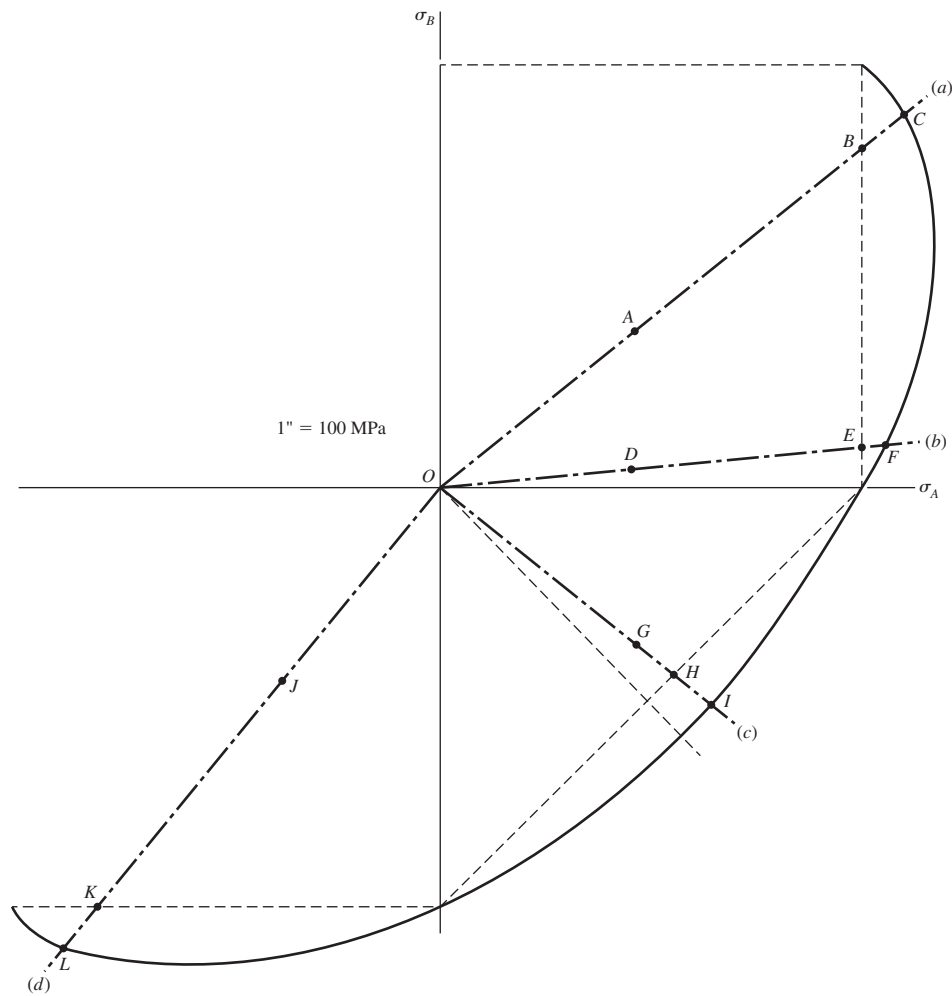
5-6 $S_y = 220 \text{ MPa}$

(a) MSS: $n = \frac{OB}{OA} = \frac{2.82}{1.3} = 2.2$

DE: $n = \frac{OC}{OA} = \frac{3.1}{1.3} = 2.4$

(b) MSS: $n = \frac{OE}{OD} = \frac{2.2}{1} = 2.2$

DE: $n = \frac{OF}{OD} = \frac{2.33}{1} = 2.3$



(c) MSS: $n = \frac{OH}{OG} = \frac{1.55}{1.3} = 1.2$

DE: $n = \frac{OI}{OG} = \frac{1.8}{1.3} = 1.4$

(d) MSS: $n = \frac{OK}{OJ} = \frac{2.82}{1.3} = 2.2$

DE: $n = \frac{OL}{OJ} = \frac{3.1}{1.3} = 2.4$

5-7 $S_{ut} = 30$ kpsi, $S_{uc} = 100$ kpsi; $\sigma_A = 20$ kpsi, $\sigma_B = 6$ kpsi

(a) MNS: Eq. (5-30a) $n = \frac{S_{ut}}{\sigma_x} = \frac{30}{20} = 1.5$ Ans.

BCM: Eq. (5-31a) $n = \frac{30}{20} = 1.5$ Ans.

MM: Eq. (5-32a) $n = \frac{30}{20} = 1.5$ Ans.

(b) $\sigma_x = 12$ kpsi, $\tau_{xy} = -8$ kpsi

$$\sigma_A, \sigma_B = \frac{12}{2} \pm \sqrt{\left(\frac{12}{2}\right)^2 + (-8)^2} = 16, -4 \text{ kpsi}$$

MNS: Eq. (5-30a) $n = \frac{30}{16} = 1.88$ Ans.

BCM: Eq. (5-31b) $\frac{1}{n} = \frac{16}{30} - \frac{(-4)}{100} \Rightarrow n = 1.74$ Ans.

MM: Eq. (5-32a) $n = \frac{30}{16} = 1.88$ Ans.

(c) $\sigma_x = -6$ kpsi, $\sigma_y = -10$ kpsi, $\tau_{xy} = -5$ kpsi

$$\sigma_A, \sigma_B = \frac{-6 - 10}{2} \pm \sqrt{\left(\frac{-6 + 10}{2}\right)^2 + (-5)^2} = -2.61, -13.39 \text{ kpsi}$$

MNS: Eq. (5-30b) $n = -\frac{100}{-13.39} = 7.47$ Ans.

BCM: Eq. (5-31c) $n = -\frac{100}{-13.39} = 7.47$ Ans.

MM: Eq. (5-32c) $n = -\frac{100}{-13.39} = 7.47$ Ans.

(d) $\sigma_x = -12$ kpsi, $\tau_{xy} = 8$ kpsi

$$\sigma_A, \sigma_B = -\frac{12}{2} \pm \sqrt{\left(-\frac{12}{2}\right)^2 + 8^2} = 4, -16 \text{ kpsi}$$

MNS: Eq. (5-30b) $n = \frac{-100}{-16} = 6.25$ Ans.

5-8 See Prob. 5-7 for plot.

$$(a) \text{ For all methods: } n = \frac{OB}{OA} = \frac{1.55}{1.03} = 1.5$$

$$(b) \text{ BCM: } n = \frac{OD}{OC} = \frac{1.4}{0.8} = 1.75$$

$$\text{All other methods: } n = \frac{OE}{OC} = \frac{1.55}{0.8} = 1.9$$

$$(c) \text{ For all methods: } n = \frac{OL}{OK} = \frac{5.2}{0.68} = 7.6$$

$$(d) \text{ MNS: } n = \frac{OJ}{OF} = \frac{5.12}{0.82} = 6.2$$

$$\text{BCM: } n = \frac{OG}{OF} = \frac{2.85}{0.82} = 3.5$$

$$\text{MM: } n = \frac{OH}{OF} = \frac{3.3}{0.82} = 4.0$$

5-9 Given: $S_y = 42$ kpsi, $S_{ut} = 66.2$ kpsi, $\varepsilon_f = 0.90$. Since $\varepsilon_f > 0.05$, the material is ductile and thus we may follow convention by setting $S_{yc} = S_{yt}$.

Use DE theory for analytical solution. For σ' , use Eq. (5-13) or (5-15) for plane stress and Eq. (5-12) or (5-14) for general 3-D.

$$(a) \sigma' = [9^2 - 9(-5) + (-5)^2]^{1/2} = 12.29 \text{ kpsi}$$

$$n = \frac{42}{12.29} = 3.42 \text{ Ans.}$$

$$(b) \sigma' = [12^2 + 3(3^2)]^{1/2} = 13.08 \text{ kpsi}$$

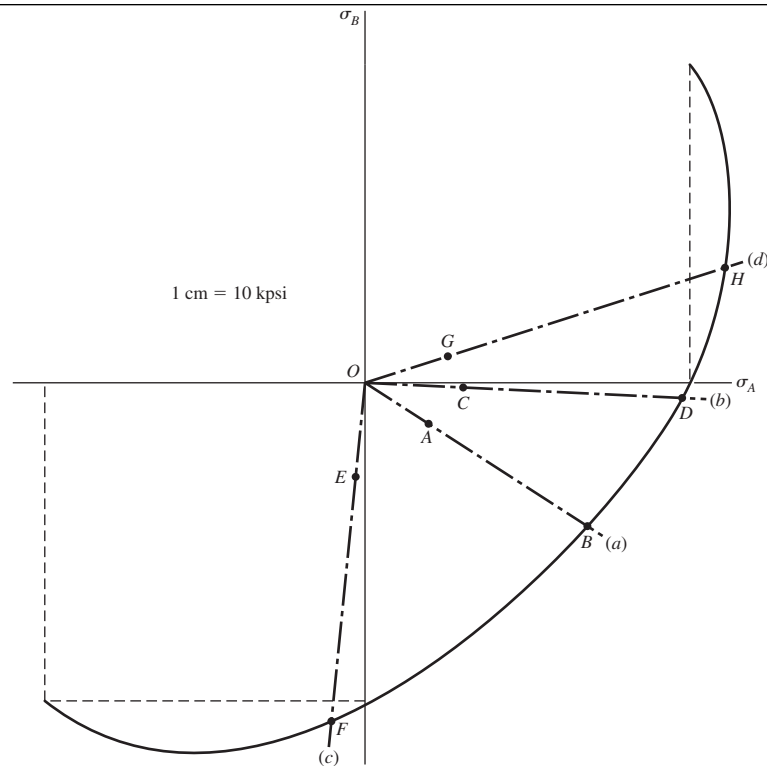
$$n = \frac{42}{13.08} = 3.21 \text{ Ans.}$$

$$(c) \sigma' = [(-4)^2 - (-4)(-9) + (-9)^2 + 3(5^2)]^{1/2} = 11.66 \text{ kpsi}$$

$$n = \frac{42}{11.66} = 3.60 \text{ Ans.}$$

$$(d) \sigma' = [11^2 - (11)(4) + 4^2 + 3(1^2)]^{1/2} = 9.798$$

$$n = \frac{42}{9.798} = 4.29 \text{ Ans.}$$



For graphical solution, plot load lines on DE envelope as shown.

(a) $\sigma_A = 9, \sigma_B = -5$ kpsi

$$n = \frac{OB}{OA} = \frac{3.5}{1} = 3.5 \quad \text{Ans.}$$

(b) $\sigma_A, \sigma_B = \frac{12}{2} \pm \sqrt{\left(\frac{12}{2}\right)^2 + 3^2} = 12.7, -0.708$ kpsi

$$n = \frac{OD}{OC} = \frac{4.2}{1.3} = 3.23$$

(c) $\sigma_A, \sigma_B = \frac{-4-9}{2} \pm \sqrt{\left(\frac{4-9}{2}\right)^2 + 5^2} = -0.910, -12.09$ kpsi

$$n = \frac{OF}{OE} = \frac{4.5}{1.25} = 3.6 \quad \text{Ans.}$$

(d) $\sigma_A, \sigma_B = \frac{11+4}{2} \pm \sqrt{\left(\frac{11-4}{2}\right)^2 + 1^2} = 11.14, 3.86$ kpsi

$$n = \frac{OH}{OG} = \frac{5.0}{1.15} = 4.35 \quad \text{Ans.}$$

5-10 This heat-treated steel exhibits $S_{yt} = 235$ kpsi, $S_{yc} = 275$ kpsi and $\epsilon_f = 0.06$. The steel is ductile ($\epsilon_f > 0.05$) but of unequal yield strengths. The Ductile Coulomb-Mohr hypothesis (DCM) of Fig. 5-19 applies — confine its use to first and fourth quadrants.

- (a) $\sigma_x = 90$ kpsi, $\sigma_y = -50$ kpsi, $\sigma_z = 0 \therefore \sigma_A = 90$ kpsi and $\sigma_B = -50$ kpsi. For the fourth quadrant, from Eq. (5-31b)

$$n = \frac{1}{(\sigma_A/S_{yt}) - (\sigma_B/S_{uc})} = \frac{1}{(90/235) - (-50/275)} = 1.77 \text{ Ans.}$$

- (b) $\sigma_x = 120$ kpsi, $\tau_{xy} = -30$ kpsi ccw. $\sigma_A, \sigma_B = 127.1, -7.08$ kpsi. For the fourth quadrant

$$n = \frac{1}{(127.1/235) - (-7.08/275)} = 1.76 \text{ Ans.}$$

- (c) $\sigma_x = -40$ kpsi, $\sigma_y = -90$ kpsi, $\tau_{xy} = 50$ kpsi. $\sigma_A, \sigma_B = -9.10, -120.9$ kpsi. Although no solution exists for the third quadrant, use

$$n = -\frac{S_{yc}}{\sigma_y} = -\frac{275}{-120.9} = 2.27 \text{ Ans.}$$

- (d) $\sigma_x = 110$ kpsi, $\sigma_y = 40$ kpsi, $\tau_{xy} = 10$ kpsi cw. $\sigma_A, \sigma_B = 111.4, 38.6$ kpsi. For the first quadrant

$$n = \frac{S_{yt}}{\sigma_A} = \frac{235}{111.4} = 2.11 \text{ Ans.}$$

Graphical Solution:

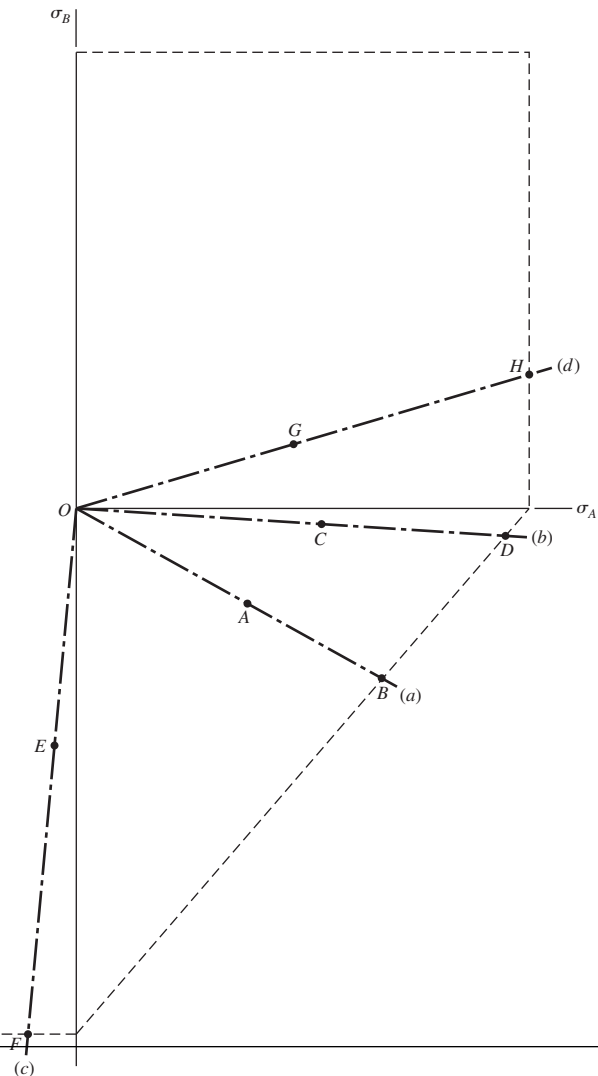
$$(a) \quad n = \frac{OB}{OA} = \frac{1.82}{1.02} = 1.78$$

$$(b) \quad n = \frac{OD}{OC} = \frac{2.24}{1.28} = 1.75$$

$$(c) \quad n = \frac{OF}{OE} = \frac{2.75}{1.24} = 2.22$$

$$(d) \quad n = \frac{OH}{OG} = \frac{2.46}{1.18} = 2.08$$

1 in = 100 kpsi



5-11 The material is brittle and exhibits unequal tensile and compressive strengths. *Decision:* Use the Modified Mohr theory.

$$S_{ut} = 22 \text{ kpsi}, \quad S_{uc} = 83 \text{ kpsi}$$

(a) $\sigma_x = 9$ kpsi, $\sigma_y = -5$ kpsi. $\sigma_A, \sigma_B = 9, -5$ kpsi. For the fourth quadrant, $|\frac{\sigma_B}{\sigma_A}| = \frac{5}{9} < 1$, use Eq. (5-32a)

$$n = \frac{S_{ut}}{\sigma_A} = \frac{22}{9} = 2.44 \quad \text{Ans.}$$

(b) $\sigma_x = 12$ kpsi, $\tau_{xy} = -3$ kpsi ccw. $\sigma_A, \sigma_B = 12.7, -0.708$ kpsi. For the fourth quadrant, $|\frac{\sigma_B}{\sigma_A}| = \frac{0.708}{12.7} < 1$,

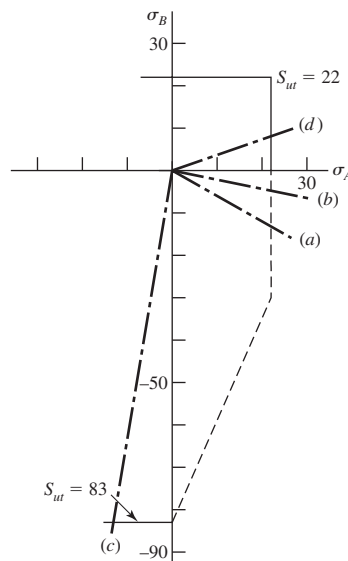
$$n = \frac{S_{ut}}{\sigma_A} = \frac{22}{12.7} = 1.73 \quad \text{Ans.}$$

(c) $\sigma_x = -4$ kpsi, $\sigma_y = -9$ kpsi, $\tau_{xy} = 5$ kpsi. $\sigma_A, \sigma_B = -0.910, -12.09$ kpsi. For the third quadrant, no solution exists; however, use Eq. (6-32c)

$$n = \frac{-83}{-12.09} = 6.87 \quad \text{Ans.}$$

(d) $\sigma_x = 11$ kpsi, $\sigma_y = 4$ kpsi, $\tau_{xy} = 1$ kpsi. $\sigma_A, \sigma_B = 11.14, 3.86$ kpsi. For the first quadrant

$$n = \frac{S_A}{\sigma_A} = \frac{S_{yt}}{\sigma_A} = \frac{22}{11.14} = 1.97 \quad \text{Ans.}$$



5-12 Since $\epsilon_f < 0.05$, the material is brittle. Thus, $S_{ut} \doteq S_{uc}$ and we may use MM which is basically the same as MNS.

(a) $\sigma_A, \sigma_B = 9, -5$ kpsi

$$n = \frac{35}{9} = 3.89 \text{ Ans.}$$

(b) $\sigma_A, \sigma_B = 12.7, -0.708$ kpsi

$$n = \frac{35}{12.7} = 2.76 \text{ Ans.}$$

(c) $\sigma_A, \sigma_B = -0.910, -12.09$ kpsi (3rd quadrant)

$$n = \frac{36}{12.09} = 2.98 \text{ Ans.}$$

(d) $\sigma_A, \sigma_B = 11.14, 3.86$ kpsi

$$n = \frac{35}{11.14} = 3.14 \text{ Ans.}$$

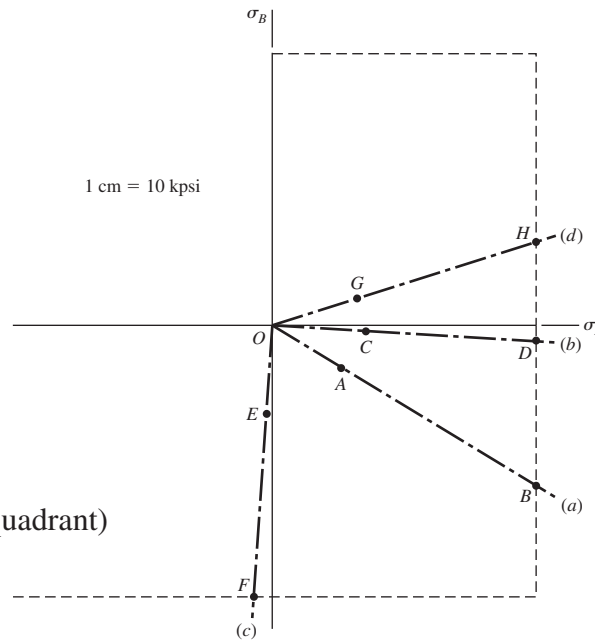
Graphical Solution:

(a) $n = \frac{OB}{OA} = \frac{4}{1} = 4.0 \text{ Ans.}$

(b) $n = \frac{OD}{OC} = \frac{3.45}{1.28} = 2.70 \text{ Ans.}$

(c) $n = \frac{OF}{OE} = \frac{3.7}{1.3} = 2.85 \text{ Ans. (3rd quadrant)}$

(d) $n = \frac{OH}{OG} = \frac{3.6}{1.15} = 3.13 \text{ Ans.}$



5-13 $S_{ut} = 30$ kpsi, $S_{uc} = 109$ kpsi

Use MM:

(a) $\sigma_A, \sigma_B = 20, 20$ kpsi

Eq. (5-32a): $n = \frac{30}{20} = 1.5 \text{ Ans.}$

(b) $\sigma_A, \sigma_B = \pm\sqrt{(15)^2} = 15, -15$ kpsi

Eq. (5-32a) $n = \frac{30}{15} = 2 \text{ Ans.}$

(c) $\sigma_A, \sigma_B = -80, -80$ kpsi

For the 3rd quadrant, there is no solution but use Eq. (5-32c).

Eq. (5-32c): $n = -\frac{109}{-80} = 1.36 \text{ Ans.}$

(d) $\sigma_A, \sigma_B = 15, -25$ kpsi, $|\sigma_B/\sigma_A| = 25/15 > 1$,

Eq. (5-32b):
$$\frac{(109 - 30)15}{109(30)} - \frac{-25}{109} = \frac{1}{n}$$

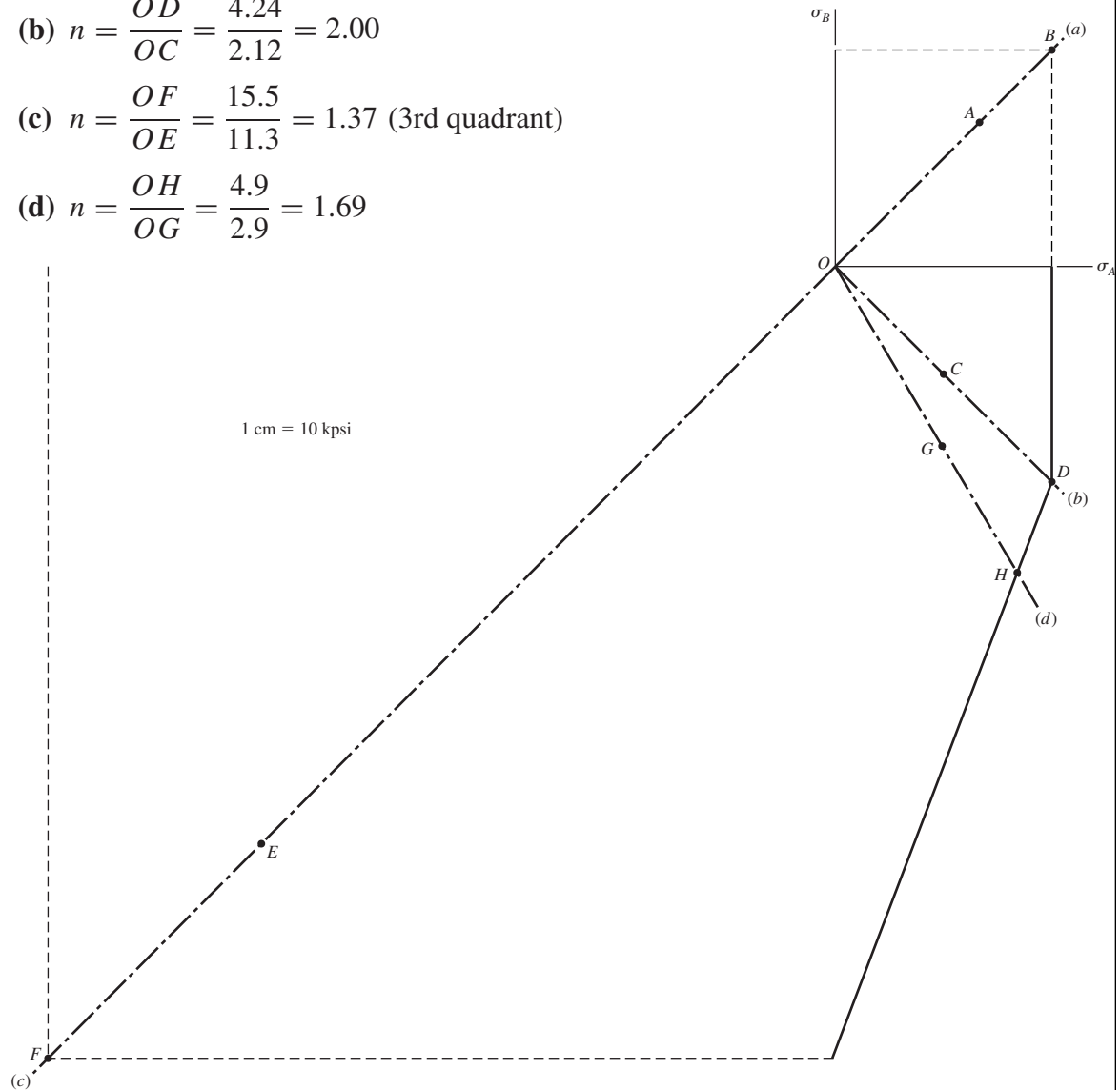
$n = 1.69$ Ans.

(a) $n = \frac{OB}{OA} = \frac{4.25}{2.83} = 1.50$

(b) $n = \frac{OD}{OC} = \frac{4.24}{2.12} = 2.00$

(c) $n = \frac{OF}{OE} = \frac{15.5}{11.3} = 1.37$ (3rd quadrant)

(d) $n = \frac{OH}{OG} = \frac{4.9}{2.9} = 1.69$



5-14 Given: AISI 1006 CD steel, $F = 0.55$ N, $P = 8.0$ kN, and $T = 30$ N · m, applying the DE theory to stress elements A and B with $S_y = 280$ MPa

A:
$$\sigma_x = \frac{32Fl}{\pi d^3} + \frac{4P}{\pi d^2} = \frac{32(0.55)(10^3)(0.1)}{\pi(0.020^3)} + \frac{4(8)(10^3)}{\pi(0.020^2)}$$

$$= 95.49(10^6) \text{ Pa} = 95.49 \text{ MPa}$$

$$\tau_{xy} = \frac{16T}{\pi d^3} = \frac{16(30)}{\pi(0.020^3)} = 19.10(10^6) \text{ Pa} = 19.10 \text{ MPa}$$

$$\sigma' = (\sigma_x^2 + 3\tau_{xy}^2)^{1/2} = [95.49^2 + 3(19.1)^2]^{1/2} = 101.1 \text{ MPa}$$

$$n = \frac{S_y}{\sigma'} = \frac{280}{101.1} = 2.77 \quad \text{Ans.}$$

B:
$$\sigma_x = \frac{4P}{\pi d^3} = \frac{4(8)(10^3)}{\pi(0.020^2)} = 25.47(10^6) \text{ Pa} = 25.47 \text{ MPa}$$

$$\tau_{xy} = \frac{16T}{\pi d^3} + \frac{4V}{3A} = \frac{16(30)}{\pi(0.020^3)} + \frac{4}{3} \left[\frac{0.55(10^3)}{(\pi/4)(0.020^2)} \right]$$

$$= 21.43(10^6) \text{ Pa} = 21.43 \text{ MPa}$$

$$\sigma' = [25.47^2 + 3(21.43^2)]^{1/2} = 45.02 \text{ MPa}$$

$$n = \frac{280}{45.02} = 6.22 \quad \text{Ans.}$$

5-15 $S_y = 32 \text{ kpsi}$

At A, $M = 6(190) = 1140 \text{ lbf}\cdot\text{in}$, $T = 4(190) = 760 \text{ lbf}\cdot\text{in}$.

$$\sigma_x = \frac{32M}{\pi d^3} = \frac{32(1140)}{\pi(3/4)^3} = 27520 \text{ psi}$$

$$\tau_{zx} = \frac{16T}{\pi d^3} = \frac{16(760)}{\pi(3/4)^3} = 9175 \text{ psi}$$

$$\tau_{\max} = \sqrt{\left(\frac{27520}{2}\right)^2 + 9175^2} = 16540 \text{ psi}$$

$$n = \frac{S_y}{2\tau_{\max}} = \frac{32}{2(16.54)} = 0.967 \quad \text{Ans.}$$

MSS predicts yielding

5-16 From Prob. 4-15, $\sigma_x = 27.52 \text{ kpsi}$, $\tau_{zx} = 9.175 \text{ kpsi}$. For Eq. (5-15), adjusted for coordinates,

$$\sigma' = [27.52^2 + 3(9.175)^2]^{1/2} = 31.78 \text{ kpsi}$$

$$n = \frac{S_y}{\sigma'} = \frac{32}{31.78} = 1.01 \quad \text{Ans.}$$

DE predicts no yielding, but it is extremely close. Shaft size should be increased.

5-17 Design decisions required:

- Material and condition
- Design factor
- Failure model
- Diameter of pin

Using $F = 416$ lbf from Ex. 5-3

$$\sigma_{\max} = \frac{32M}{\pi d^3}$$

$$d = \left(\frac{32M}{\pi \sigma_{\max}} \right)^{1/3}$$

Decision 1: Select the same material and condition of Ex. 5-3 (AISI 1035 steel, $S_y = 81\,000$).

Decision 2: Since we prefer the pin to yield, set n_d a little larger than 1. Further explanation will follow.

Decision 3: Use the Distortion Energy static failure theory.

Decision 4: Initially set $n_d = 1$

$$\sigma_{\max} = \frac{S_y}{n_d} = \frac{S_y}{1} = 81\,000 \text{ psi}$$

$$d = \left[\frac{32(416)(15)}{\pi(81\,000)} \right]^{1/3} = 0.922 \text{ in}$$

Choose preferred size of $d = 1.000$ in

$$F = \frac{\pi(1)^3(81\,000)}{32(15)} = 530 \text{ lbf}$$

$$n = \frac{530}{416} = 1.274$$

Set design factor to $n_d = 1.274$

Adequacy Assessment:

$$\sigma_{\max} = \frac{S_y}{n_d} = \frac{81\,000}{1.274} = 63\,580 \text{ psi}$$

$$d = \left[\frac{32(416)(15)}{\pi(63\,580)} \right]^{1/3} = 1.000 \text{ in (OK)}$$

$$F = \frac{\pi(1)^3(81\,000)}{32(15)} = 530 \text{ lbf}$$

$$n = \frac{530}{416} = 1.274 \text{ (OK)}$$

5-18 For a thin walled cylinder made of AISI 1018 steel, $S_y = 54$ kpsi, $S_{ut} = 64$ kpsi.

The state of stress is

$$\sigma_t = \frac{pd}{4t} = \frac{p(8)}{4(0.05)} = 40p, \quad \sigma_l = \frac{pd}{8t} = 20p, \quad \sigma_r = -p$$

These three are all principal stresses. Therefore,

$$\begin{aligned} \sigma' &= \frac{1}{\sqrt{2}}[(\sigma_1 - \sigma_2)^2 + (\sigma_2 - \sigma_3)^2 + (\sigma_3 - \sigma_1)^2]^{1/2} \\ &= \frac{1}{\sqrt{2}}[(40p - 20p)^2 + (20p + p)^2 + (-p - 40p)^2] \\ &= 35.51p = 54 \Rightarrow p = 1.52 \text{ kpsi (for yield) Ans.} \end{aligned}$$

For rupture, $35.51p = 64 \Rightarrow p = 1.80$ kpsi Ans.

5-19 For hot-forged AISI steel $w = 0.282$ lbf/in³, $S_y = 30$ kpsi and $\nu = 0.292$. Then $\rho = w/g = 0.282/386$ lbf · s²/in; $r_i = 3$ in; $r_o = 5$ in; $r_i^2 = 9$; $r_o^2 = 25$; $3 + \nu = 3.292$; $1 + 3\nu = 1.876$.

Eq. (3-55) for $r = r_i$ becomes

$$\sigma_t = \rho\omega^2 \left(\frac{3 + \nu}{8}\right) \left[2r_o^2 + r_i^2 \left(1 - \frac{1 + 3\nu}{3 + \nu}\right)\right]$$

Rearranging and substituting the above values:

$$\begin{aligned} \frac{S_y}{\omega^2} &= \frac{0.282}{386} \left(\frac{3.292}{8}\right) \left[50 + 9 \left(1 - \frac{1.876}{3.292}\right)\right] \\ &= 0.01619 \end{aligned}$$

Setting the tangential stress equal to the yield stress,

$$\omega = \left(\frac{30\,000}{0.01619}\right)^{1/2} = 1361 \text{ rad/s}$$

or

$$\begin{aligned} n &= 60\omega/2\pi = 60(1361)/(2\pi) \\ &= 13\,000 \text{ rev/min} \end{aligned}$$

Now check the stresses at $r = (r_o r_i)^{1/2}$, or $r = [5(3)]^{1/2} = 3.873$ in

$$\begin{aligned} \sigma_r &= \rho\omega^2 \left(\frac{3 + \nu}{8}\right) (r_o - r_i)^2 \\ &= \frac{0.282\omega^2}{386} \left(\frac{3.292}{8}\right) (5 - 3)^2 \\ &= 0.001\,203\omega^2 \end{aligned}$$

Applying Eq. (3-55) for σ_t

$$\begin{aligned} \sigma_t &= \omega^2 \left(\frac{0.282}{386}\right) \left(\frac{3.292}{8}\right) \left[9 + 25 + \frac{9(25)}{15} - \frac{1.876(15)}{3.292}\right] \\ &= 0.012\,16\omega^2 \end{aligned}$$

Using the Distortion-Energy theory

$$\sigma' = (\sigma_t^2 - \sigma_r \sigma_t + \sigma_r^2)^{1/2} = 0.011\,61\omega^2$$

Solving
$$\omega = \left(\frac{30\,000}{0.011\,61} \right)^{1/2} = 1607 \text{ rad/s}$$

So the inner radius governs and $n = 13\,000 \text{ rev/min}$ *Ans.*

5-20 For a thin-walled pressure vessel,

$$d_i = 3.5 - 2(0.065) = 3.37 \text{ in}$$

$$\sigma_t = \frac{p(d_i + t)}{2t}$$

$$\sigma_t = \frac{500(3.37 + 0.065)}{2(0.065)} = 13\,212 \text{ psi}$$

$$\sigma_l = \frac{pd_i}{4t} = \frac{500(3.37)}{4(0.065)} = 6481 \text{ psi}$$

$$\sigma_r = -p_i = -500 \text{ psi}$$

These are all principal stresses, thus,

$$\sigma' = \frac{1}{\sqrt{2}} \{ (13\,212 - 6481)^2 + [6481 - (-500)]^2 + (-500 - 13\,212)^2 \}^{1/2}$$

$$\sigma' = 11\,876 \text{ psi}$$

$$n = \frac{S_y}{\sigma'} = \frac{46\,000}{11\,876} = \frac{46\,000}{11\,876} = 3.87 \text{ } \textit{Ans.}$$

5-21 Table A-20 gives S_y as 320 MPa. The maximum significant stress condition occurs at r_i where $\sigma_1 = \sigma_r = 0$, $\sigma_2 = 0$, and $\sigma_3 = \sigma_t$. From Eq. (3-49) for $r = r_i$, $p_i = 0$,

$$\sigma_t = -\frac{2r_o^2 p_o}{r_o^2 - r_i^2} = -\frac{2(150^2)p_o}{150^2 - 100^2} = -3.6p_o$$

$$\sigma' = 3.6p_o = S_y = 320$$

$$p_o = \frac{320}{3.6} = 88.9 \text{ MPa } \textit{Ans.}$$

5-22 $S_{ut} = 30 \text{ kpsi}$, $w = 0.260 \text{ lbf/in}^3$, $\nu = 0.211$, $3 + \nu = 3.211$, $1 + 3\nu = 1.633$. At the inner radius, from Prob. 5-19

$$\frac{\sigma_t}{\omega^2} = \rho \left(\frac{3 + \nu}{8} \right) \left(2r_o^2 + r_i^2 - \frac{1 + 3\nu}{3 + \nu} r_i^2 \right)$$

Here $r_o^2 = 25$, $r_i^2 = 9$, and so

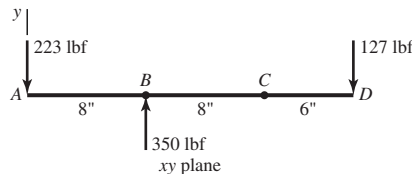
$$\frac{\sigma_t}{\omega^2} = \frac{0.260}{386} \left(\frac{3.211}{8} \right) \left(50 + 9 - \frac{1.633(9)}{3.211} \right) = 0.0147$$

Since σ_r is of the same sign, we use M2M failure criteria in the first quadrant. From Table A-24, $S_{ut} = 31$ kpsi, thus,

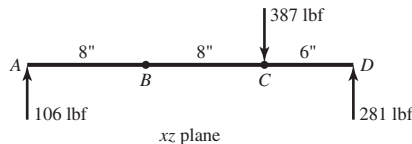
$$\begin{aligned} \omega &= \left(\frac{31\,000}{0.0147} \right)^{1/2} = 1452 \text{ rad/s} \\ \text{rpm} &= 60\omega / (2\pi) = 60(1452) / (2\pi) \\ &= 13\,866 \text{ rev/min} \end{aligned}$$

Using the grade number of 30 for $S_{ut} = 30\,000$ kpsi gives a bursting speed of 13 640 rev/min.

5-23 $T_C = (360 - 27)(3) = 1000 \text{ lbf} \cdot \text{in}$, $T_B = (300 - 50)(4) = 1000 \text{ lbf} \cdot \text{in}$



In xy plane, $M_B = 223(8) = 1784 \text{ lbf} \cdot \text{in}$ and $M_C = 127(6) = 762 \text{ lbf} \cdot \text{in}$.



In the xz plane, $M_B = 848 \text{ lbf} \cdot \text{in}$ and $M_C = 1686 \text{ lbf} \cdot \text{in}$. The resultants are

$$\begin{aligned} M_B &= [(1784)^2 + (848)^2]^{1/2} = 1975 \text{ lbf} \cdot \text{in} \\ M_C &= [(1686)^2 + (762)^2]^{1/2} = 1850 \text{ lbf} \cdot \text{in} \end{aligned}$$

So point B governs and the stresses are

$$\begin{aligned} \tau_{xy} &= \frac{16T}{\pi d^3} = \frac{16(1000)}{\pi d^3} = \frac{5093}{d^3} \text{ psi} \\ \sigma_x &= \frac{32M_B}{\pi d^3} = \frac{32(1975)}{\pi d^3} = \frac{20\,120}{d^3} \text{ psi} \end{aligned}$$

Then

$$\begin{aligned} \sigma_A, \sigma_B &= \frac{\sigma_x}{2} \pm \left[\left(\frac{\sigma_x}{2} \right)^2 + \tau_{xy}^2 \right]^{1/2} \\ \sigma_A, \sigma_B &= \frac{1}{d^3} \left\{ \frac{20.12}{2} \pm \left[\left(\frac{20.12}{2} \right)^2 + (5.09)^2 \right]^{1/2} \right\} \\ &= \frac{(10.06 \pm 11.27)}{d^3} \text{ kpsi} \cdot \text{in}^3 \end{aligned}$$

Then

$$\sigma_A = \frac{10.06 + 11.27}{d^3} = \frac{21.33}{d^3} \text{ kpsi}$$

and

$$\sigma_B = \frac{10.06 - 11.27}{d^3} = -\frac{1.21}{d^3} \text{ kpsi}$$

For this state of stress, use the Brittle-Coulomb-Mohr theory for illustration. Here we use $S_{ut}(\text{min}) = 25 \text{ kpsi}$, $S_{uc}(\text{min}) = 97 \text{ kpsi}$, and Eq. (5-31b) to arrive at

$$\frac{21.33}{25d^3} - \frac{-1.21}{97d^3} = \frac{1}{2.8}$$

Solving gives $d = 1.34 \text{ in.}$ So use $d = 1 \frac{3}{8} \text{ in.}$ *Ans.*

Note that this has been solved as a statics problem. Fatigue will be considered in the next chapter.

5-24 As in Prob. 5-23, we will assume this to be statics problem. Since the proportions are unchanged, the bearing reactions will be the same as in Prob. 5-23. Thus

$$xy \text{ plane:} \quad M_B = 223(4) = 892 \text{ lbf} \cdot \text{in}$$

$$xz \text{ plane:} \quad M_B = 106(4) = 424 \text{ lbf} \cdot \text{in}$$

So

$$M_{\max} = [(892)^2 + (424)^2]^{1/2} = 988 \text{ lbf} \cdot \text{in}$$

$$\sigma_x = \frac{32M_B}{\pi d^3} = \frac{32(988)}{\pi d^3} = \frac{10060}{d^3} \text{ psi}$$

Since the torsional stress is unchanged,

$$\tau_{xz} = 5.09/d^3 \text{ kpsi}$$

$$\sigma_A, \sigma_B = \frac{1}{d^3} \left\{ \left(\frac{10.06}{2} \right) \pm \left[\left(\frac{10.06}{2} \right)^2 + (5.09)^2 \right]^{1/2} \right\}$$

$$\sigma_A = 12.19/d^3 \quad \text{and} \quad \sigma_B = -2.13/d^3$$

Using the Brittle-Coulomb-Mohr, as was used in Prob. 5-23, gives

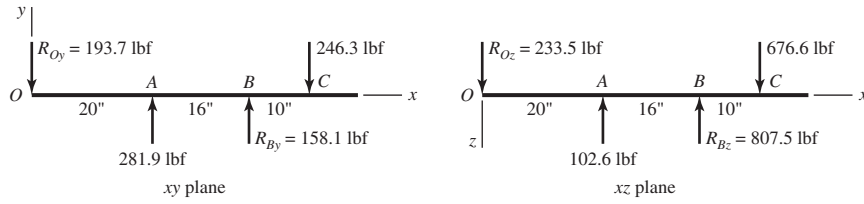
$$\frac{12.19}{25d^3} - \frac{-2.13}{97d^3} = \frac{1}{2.8}$$

Solving gives $d = 1 \frac{1}{8} \text{ in.}$ *Ans.*

5-25 $(F_A)_t = 300 \cos 20 = 281.9 \text{ lbf}$, $(F_A)_r = 300 \sin 20 = 102.6 \text{ lbf}$

$$T = 281.9(12) = 3383 \text{ lbf} \cdot \text{in}, \quad (F_C)_t = \frac{3383}{5} = 676.6 \text{ lbf}$$

$$(F_C)_r = 676.6 \tan 20 = 246.3 \text{ lbf}$$



$$M_A = 20\sqrt{193.7^2 + 233.5^2} = 6068 \text{ lbf} \cdot \text{in}$$

$$M_B = 10\sqrt{246.3^2 + 676.6^2} = 7200 \text{ lbf} \cdot \text{in} \quad (\text{maximum})$$

$$\sigma_x = \frac{32(7200)}{\pi d^3} = \frac{73\,340}{d^3}$$

$$\tau_{xy} = \frac{16(3383)}{\pi d^3} = \frac{17\,230}{d^3}$$

$$\sigma' = (\sigma_x^2 + 3\tau_{xy}^2)^{1/2} = \frac{S_y}{n}$$

$$\left[\left(\frac{73\,340}{d^3} \right)^2 + 3 \left(\frac{17\,230}{d^3} \right)^2 \right]^{1/2} = \frac{79\,180}{d^3} = \frac{60\,000}{3.5}$$

$d = 1.665 \text{ in}$ so use a standard diameter size of 1.75 in *Ans.*

5-26 From Prob. 5-25,

$$\tau_{\max} = \left[\left(\frac{\sigma_x}{2} \right)^2 + \tau_{xy}^2 \right]^{1/2} = \frac{S_y}{2n}$$

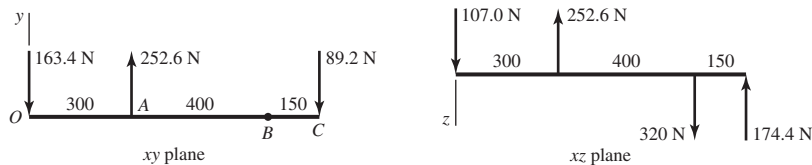
$$\left[\left(\frac{73\,340}{2d^3} \right)^2 + \left(\frac{17\,230}{d^3} \right)^2 \right]^{1/2} = \frac{40\,516}{d^3} = \frac{60\,000}{2(3.5)}$$

$d = 1.678 \text{ in}$ so use 1.75 in *Ans.*

5-27 $T = (270 - 50)(0.150) = 33 \text{ N} \cdot \text{m}$, $S_y = 370 \text{ MPa}$

$$(T_1 - 0.15T_1)(0.125) = 33 \Rightarrow T_1 = 310.6 \text{ N}, \quad T_2 = 0.15(310.6) = 46.6 \text{ N}$$

$$(T_1 + T_2) \cos 45 = 252.6 \text{ N}$$



$$M_A = 0.3\sqrt{163.4^2 + 107^2} = 58.59 \text{ N} \cdot \text{m} \quad (\text{maximum})$$

$$M_B = 0.15\sqrt{89.2^2 + 174.4^2} = 29.38 \text{ N} \cdot \text{m}$$

$$\sigma_x = \frac{32(58.59)}{\pi d^3} = \frac{596.8}{d^3}$$

$$\tau_{xy} = \frac{16(33)}{\pi d^3} = \frac{168.1}{d^3}$$

$$\sigma' = (\sigma_x^2 + 3\tau_{xy}^2)^{1/2} = \left[\left(\frac{596.8}{d^3} \right)^2 + 3 \left(\frac{168.1}{d^3} \right)^2 \right]^{1/2} = \frac{664.0}{d^3} = \frac{370(10^6)}{3.0}$$

$$d = 17.5(10^{-3}) \text{ m} = 17.5 \text{ mm}, \quad \text{so use } 18 \text{ mm} \quad \text{Ans.}$$

5-28 From Prob. 5-27,

$$\tau_{\max} = \left[\left(\frac{\sigma_x}{2} \right)^2 + \tau_{xy}^2 \right]^{1/2} = \frac{S_y}{2n}$$

$$\left[\left(\frac{596.8}{2d^3} \right)^2 + \left(\frac{168.1}{d^3} \right)^2 \right]^{1/2} = \frac{342.5}{d^3} = \frac{370(10^6)}{2(3.0)}$$

$$d = 17.7(10^{-3}) \text{ m} = 17.7 \text{ mm}, \quad \text{so use } 18 \text{ mm} \quad \text{Ans.}$$

5-29 For the loading scheme shown in Figure (c),

$$\begin{aligned} M_{\max} &= \frac{F}{2} \left(\frac{a}{2} + \frac{b}{4} \right) = \frac{4.4}{2}(6 + 4.5) \\ &= 23.1 \text{ N} \cdot \text{m} \end{aligned}$$

For a stress element at A:

$$\sigma_x = \frac{32M}{\pi d^3} = \frac{32(23.1)(10^3)}{\pi(12)^3} = 136.2 \text{ MPa}$$

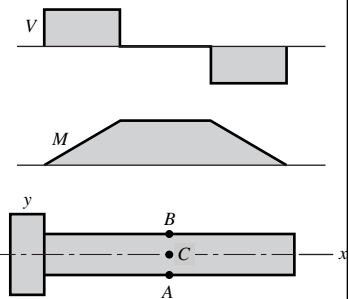
The shear at C is

$$\tau_{xy} = \frac{4(F/2)}{3\pi d^2/4} = \frac{4(4.4/2)(10^3)}{3\pi(12)^2/4} = 25.94 \text{ MPa}$$

$$\tau_{\max} = \left[\left(\frac{136.2}{2} \right)^2 \right]^{1/2} = 68.1 \text{ MPa}$$

Since $S_y = 220 \text{ MPa}$, $S_{sy} = 220/2 = 110 \text{ MPa}$, and

$$n = \frac{S_{sy}}{\tau_{\max}} = \frac{110}{68.1} = 1.62 \quad \text{Ans.}$$



For the loading scheme depicted in Figure (d)

$$M_{\max} = \frac{F}{2} \left(\frac{a+b}{2} \right) - \frac{F}{2} \left(\frac{1}{2} \right) \left(\frac{b}{2} \right)^2 = \frac{F}{2} \left(\frac{a}{2} + \frac{b}{4} \right)$$

This result is the same as that obtained for Figure (c). At point B, we also have a surface compression of

$$\sigma_y = \frac{-F}{A} = \frac{-F}{bd} = \frac{-4.4(10^3)}{18(12)} = -20.4 \text{ MPa}$$

With $\sigma_x = -136.2$ MPa. From a Mohrs circle diagram, $\tau_{\max} = 136.2/2 = 68.1$ MPa.

$$n = \frac{110}{68.1} = 1.62 \text{ MPa } \textit{Ans.}$$

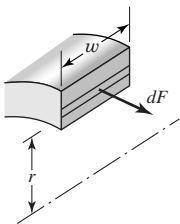
5-30 Based on Figure (c) and using Eq. (5-15)

$$\begin{aligned} \sigma' &= (\sigma_x^2)^{1/2} \\ &= (136.2^2)^{1/2} = 136.2 \text{ MPa} \\ n &= \frac{S_y}{\sigma'} = \frac{220}{136.2} = 1.62 \textit{ Ans.} \end{aligned}$$

Based on Figure (d) and using Eq. (5-15) and the solution of Prob. 5-29,

$$\begin{aligned} \sigma' &= (\sigma_x^2 - \sigma_x \sigma_y + \sigma_y^2)^{1/2} \\ &= [(-136.2)^2 - (-136.2)(-20.4) + (-20.4)^2]^{1/2} \\ &= 127.2 \text{ MPa} \\ n &= \frac{S_y}{\sigma'} = \frac{220}{127.2} = 1.73 \textit{ Ans.} \end{aligned}$$

5-31



When the ring is set, the hoop tension in the ring is equal to the screw tension.

$$\sigma_t = \frac{r_i^2 p_i}{r_o^2 - r_i^2} \left(1 + \frac{r_o^2}{r^2} \right)$$

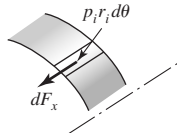
We have the hoop tension at any radius. The differential hoop tension dF is

$$\begin{aligned} dF &= w \sigma_t dr \\ F &= \int_{r_i}^{r_o} w \sigma_t dr = \frac{w r_i^2 p_i}{r_o^2 - r_i^2} \int_{r_i}^{r_o} \left(1 + \frac{r_o^2}{r^2} \right) dr = w r_i p_i \end{aligned} \quad (1)$$

The screw equation is

$$F_i = \frac{T}{0.2d} \quad (2)$$

From Eqs. (1) and (2)



$$p_i = \frac{F}{wr_i} = \frac{T}{0.2dwr_i}$$

$$dF_x = fp_i r_i d\theta$$

$$F_x = \int_0^{2\pi} fp_i wr_i d\theta = \frac{fTw}{0.2dwr_i} r_i \int_0^{2\pi} d\theta$$

$$= \frac{2\pi fT}{0.2d} \quad \text{Ans.}$$

5-32

(a) From Prob. 5-31, $T = 0.2F_i d$

$$F_i = \frac{T}{0.2d} = \frac{190}{0.2(0.25)} = 3800 \text{ lbf} \quad \text{Ans.}$$

(b) From Prob. 5-31, $F = wr_i p_i$

$$p_i = \frac{F}{wr_i} = \frac{F_i}{wr_i} = \frac{3800}{0.5(0.5)} = 15\,200 \text{ psi} \quad \text{Ans.}$$

$$\begin{aligned} \text{(c)} \quad \sigma_t &= \frac{r_i^2 p_i}{r_o^2 - r_i^2} \left(1 + \frac{r_o^2}{r^2}\right)_{r=r_i} = \frac{p_i (r_i^2 + r_o^2)}{r_o^2 - r_i^2} \\ &= \frac{15\,200(0.5^2 + 1^2)}{1^2 - 0.5^2} = 25\,333 \text{ psi} \quad \text{Ans.} \end{aligned}$$

$$\sigma_r = -p_i = -15\,200 \text{ psi}$$

$$\begin{aligned} \text{(d)} \quad \tau_{\max} &= \frac{\sigma_1 - \sigma_3}{2} = \frac{\sigma_t - \sigma_r}{2} \\ &= \frac{25\,333 - (-15\,200)}{2} = 20\,267 \text{ psi} \quad \text{Ans.} \end{aligned}$$

$$\begin{aligned} \sigma' &= (\sigma_A^2 + \sigma_B^2 - \sigma_A \sigma_B)^{1/2} \\ &= [25\,333^2 + (-15\,200)^2 - 25\,333(-15\,200)]^{1/2} \\ &= 35\,466 \text{ psi} \quad \text{Ans.} \end{aligned}$$

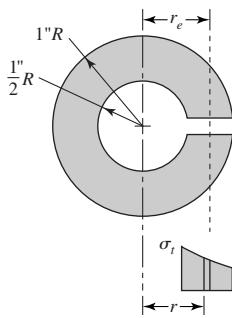
(e) Maximum Shear hypothesis

$$n = \frac{S_{sy}}{\tau_{\max}} = \frac{0.5S_y}{\tau_{\max}} = \frac{0.5(63)}{20.267} = 1.55 \quad \text{Ans.}$$

Distortion Energy theory

$$n = \frac{S_y}{\sigma'} = \frac{63}{35\,466} = 1.78 \quad \text{Ans.}$$

5-33



The moment about the center caused by force F is Fr_e where r_e is the effective radius. This is balanced by the moment about the center caused by the tangential (hoop) stress.

$$\begin{aligned} Fr_e &= \int_{r_i}^{r_o} r \sigma_t w dr \\ &= \frac{w p_i r_i^2}{r_o^2 - r_i^2} \int_{r_i}^{r_o} \left(r + \frac{r_o^2}{r} \right) dr \\ r_e &= \frac{w p_i r_i^2}{F (r_o^2 - r_i^2)} \left(\frac{r_o^2 - r_i^2}{2} + r_o^2 \ln \frac{r_o}{r_i} \right) \end{aligned}$$

From Prob. 5-31, $F = w r_i p_i$. Therefore,

$$r_e = \frac{r_i}{r_o^2 - r_i^2} \left(\frac{r_o^2 - r_i^2}{2} + r_o^2 \ln \frac{r_o}{r_i} \right)$$

For the conditions of Prob. 5-31, $r_i = 0.5$ and $r_o = 1$ in

$$r_e = \frac{0.5}{1^2 - 0.5^2} \left(\frac{1^2 - 0.5^2}{2} + 1^2 \ln \frac{1}{0.5} \right) = 0.712 \text{ in}$$

5-34 $\delta_{\text{nom}} = 0.0005$ in

(a) From Eq. (3-57)

$$p = \frac{30(10^6)(0.0005)}{(1^3)} \left[\frac{(1.5^2 - 1^2)(1^2 - 0.5^2)}{2(1.5^2 - 0.5^2)} \right] = 3516 \text{ psi Ans.}$$

Inner member:

$$\text{Eq. (3-58)} \quad (\sigma_t)_i = -p \frac{R^2 + r_i^2}{R^2 - r_i^2} = -3516 \left(\frac{1^2 + 0.5^2}{1^2 - 0.5^2} \right) = -5860 \text{ psi}$$

$$(\sigma_r)_i = -p = -3516 \text{ psi}$$

$$\begin{aligned} \text{Eq. (5-13)} \quad \sigma'_i &= (\sigma_A^2 - \sigma_A \sigma_B + \sigma_B^2)^{1/2} \\ &= [(-5860)^2 - (-5860)(-3516) + (-3516)^2]^{1/2} \\ &= 5110 \text{ psi Ans.} \end{aligned}$$

Outer member:

$$\text{Eq. (3-59)} \quad (\sigma_t)_o = 3516 \left(\frac{1.5^2 + 1^2}{1.5^2 - 1^2} \right) = 9142 \text{ psi}$$

$$(\sigma_r)_o = -p = -3516 \text{ psi}$$

$$\begin{aligned} \text{Eq. (5-13)} \quad \sigma'_o &= [9142^2 - 9142(-3516) + (-3516)^2]^{1/2} \\ &= 11320 \text{ psi Ans.} \end{aligned}$$

(b) For a solid inner tube,

$$p = \frac{30(10^6)(0.0005)}{1} \left[\frac{(1.5^2 - 1^2)(1^2)}{2(1^2)(1.5^2)} \right] = 4167 \text{ psi } \textit{Ans.}$$

$$(\sigma_t)_i = -p = -4167 \text{ psi}, \quad (\sigma_r)_i = -4167 \text{ psi}$$

$$\sigma'_i = [(-4167)^2 - (-4167)(-4167) + (-4167)^2]^{1/2} = 4167 \text{ psi } \textit{Ans.}$$

$$(\sigma_t)_o = 4167 \left(\frac{1.5^2 + 1^2}{1.5^2 - 1^2} \right) = 10830 \text{ psi}, \quad (\sigma_r)_o = -4167 \text{ psi}$$

$$\sigma'_o = [10830^2 - 10830(-4167) + (-4167)^2]^{1/2} = 13410 \text{ psi } \textit{Ans.}$$

5-35 Using Eq. (3-57) with diametral values,

$$p = \frac{207(10^3)(0.02)}{(50^3)} \left[\frac{(75^2 - 50^2)(50^2 - 25^2)}{2(75^2 - 25^2)} \right] = 19.41 \text{ MPa } \textit{Ans.}$$

$$\text{Eq. (3-58)} \quad (\sigma_t)_i = -19.41 \left(\frac{50^2 + 25^2}{50^2 - 25^2} \right) = -32.35 \text{ MPa}$$

$$(\sigma_r)_i = -19.41 \text{ MPa}$$

$$\text{Eq. (5-13)} \quad \sigma'_i = [(-32.35)^2 - (-32.35)(-19.41) + (-19.41)^2]^{1/2} \\ = 28.20 \text{ MPa } \textit{Ans.}$$

$$\text{Eq. (3-59)} \quad (\sigma_t)_o = 19.41 \left(\frac{75^2 + 50^2}{75^2 - 50^2} \right) = 50.47 \text{ MPa},$$

$$(\sigma_r)_o = -19.41 \text{ MPa}$$

$$\sigma'_o = [50.47^2 - 50.47(-19.41) + (-19.41)^2]^{1/2} = 62.48 \text{ MPa } \textit{Ans.}$$

5-36 Max. shrink-fit conditions: Diametral interference $\delta_d = 50.01 - 49.97 = 0.04$ mm. Equation (3-57) using diametral values:

$$p = \frac{207(10^3)0.04}{50^3} \left[\frac{(75^2 - 50^2)(50^2 - 25^2)}{2(75^2 - 25^2)} \right] = 38.81 \text{ MPa } \textit{Ans.}$$

$$\text{Eq. (3-58):} \quad (\sigma_t)_i = -38.81 \left(\frac{50^2 + 25^2}{50^2 - 25^2} \right) = -64.68 \text{ MPa}$$

$$(\sigma_r)_i = -38.81 \text{ MPa}$$

Eq. (5-13):

$$\sigma'_i = [(-64.68)^2 - (-64.68)(-38.81) + (-38.81)^2]^{1/2} \\ = 56.39 \text{ MPa } \textit{Ans.}$$

5-37

$$\delta = \frac{1.9998}{2} - \frac{1.999}{2} = 0.0004 \text{ in}$$

Eq. (3-56)

$$0.0004 = \frac{p(1)}{14.5(10^6)} \left[\frac{2^2 + 1^2}{2^2 - 1^2} + 0.211 \right] + \frac{p(1)}{30(10^6)} \left[\frac{1^2 + 0}{1^2 - 0} - 0.292 \right]$$

$$p = 2613 \text{ psi}$$

Applying Eq. (4-58) at R ,

$$(\sigma_t)_o = 2613 \left(\frac{2^2 + 1^2}{2^2 - 1^2} \right) = 4355 \text{ psi}$$

$$(\sigma_r)_o = -2613 \text{ psi}, \quad S_{ut} = 20 \text{ kpsi}, \quad S_{uc} = 83 \text{ kpsi}$$

$$\left| \frac{\sigma_o}{\sigma_A} \right| = \frac{2613}{4355} < 1, \quad \therefore \text{ use Eq. (5-32a)}$$

$$h = S_{ut}/\sigma_A = 20/4.355 = 4.59 \quad \text{Ans.}$$

5-38 $E = 30(10^6) \text{ psi}$, $\nu = 0.292$, $I = (\pi/64)(2^4 - 1.5^4) = 0.5369 \text{ in}^4$

Eq. (3-57) can be written in terms of diameters,

$$p = \frac{E\delta_d}{D} \left[\frac{(d_o^2 - D^2)(D^2 - d_i^2)}{2D^2(d_o^2 - d_i^2)} \right] = \frac{30(10^6)}{1.75} (0.00246) \left[\frac{(2^2 - 1.75^2)(1.75^2 - 1.5^2)}{2(1.75^2)(2^2 - 1.5^2)} \right]$$

$$= 2997 \text{ psi} = 2.997 \text{ kpsi}$$

Outer member:

$$\text{Outer radius: } (\sigma_t)_o = \frac{1.75^2(2.997)}{2^2 - 1.75^2} (2) = 19.58 \text{ kpsi}, \quad (\sigma_r)_o = 0$$

$$\text{Inner radius: } (\sigma_t)_i = \frac{1.75^2(2.997)}{2^2 - 1.75^2} \left(1 + \frac{2^2}{1.75^2} \right) = 22.58 \text{ kpsi}, \quad (\sigma_r)_i = -2.997 \text{ kpsi}$$

Bending:

$$r_o: \quad (\sigma_x)_o = \frac{6.000(2/2)}{0.5369} = 11.18 \text{ kpsi}$$

$$r_i: \quad (\sigma_x)_i = \frac{6.000(1.75/2)}{0.5369} = 9.78 \text{ kpsi}$$

Torsion: $J = 2I = 1.0738 \text{ in}^4$

$$r_o: \quad (\tau_{xy})_o = \frac{8.000(2/2)}{1.0738} = 7.45 \text{ kpsi}$$

$$r_i: \quad (\tau_{xy})_i = \frac{8.000(1.75/2)}{1.0738} = 6.52 \text{ kpsi}$$

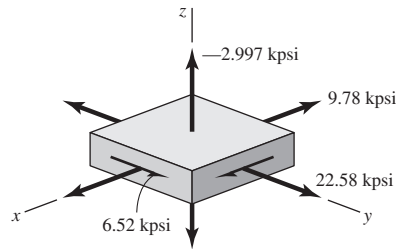
Outer radius is plane stress

$$\sigma_x = 11.18 \text{ kpsi}, \quad \sigma_y = 19.58 \text{ kpsi}, \quad \tau_{xy} = 7.45 \text{ kpsi}$$

$$\text{Eq. (5-15)} \quad \sigma' = [11.18^2 - (11.18)(19.58) + 19.58^2 + 3(7.45^2)]^{1/2} = \frac{S_y}{n_o} = \frac{60}{n_o}$$

$$21.35 = \frac{60}{n_o} \Rightarrow n_o = 2.81 \text{ Ans.}$$

Inner radius, 3D state of stress



From Eq. (5-14) with $\tau_{yz} = \tau_{zx} = 0$

$$\sigma' = \frac{1}{\sqrt{2}} [(9.78 - 22.58)^2 + (22.58 + 2.997)^2 + (-2.997 - 9.78)^2 + 6(6.52)^2]^{1/2} = \frac{60}{n_i}$$

$$24.86 = \frac{60}{n_i} \Rightarrow n_i = 2.41 \text{ Ans.}$$

5-39 From Prob. 5-38: $p = 2.997 \text{ kpsi}$, $I = 0.5369 \text{ in}^4$, $J = 1.0738 \text{ in}^4$

Inner member:

$$\text{Outer radius:} \quad (\sigma_t)_o = -2.997 \left[\frac{(0.875^2 + 0.75^2)}{(0.875^2 - 0.75^2)} \right] = -19.60 \text{ kpsi}$$

$$(\sigma_r)_o = -2.997 \text{ kpsi}$$

$$\text{Inner radius:} \quad (\sigma_t)_i = -\frac{2(2.997)(0.875^2)}{0.875^2 - 0.75^2} = -22.59 \text{ kpsi}$$

$$(\sigma_r)_i = 0$$

Bending:

$$r_o: \quad (\sigma_x)_o = \frac{6(0.875)}{0.5369} = 9.78 \text{ kpsi}$$

$$r_i: \quad (\sigma_x)_i = \frac{6(0.75)}{0.5369} = 8.38 \text{ kpsi}$$

Torsion:

$$r_o: \quad (\tau_{xy})_o = \frac{8(0.875)}{1.0738} = 6.52 \text{ kpsi}$$

$$r_i: \quad (\tau_{xy})_i = \frac{8(0.75)}{1.0738} = 5.59 \text{ kpsi}$$

The inner radius is in plane stress: $\sigma_x = 8.38$ kpsi, $\sigma_y = -22.59$ kpsi, $\tau_{xy} = 5.59$ kpsi

$$\sigma'_i = [8.38^2 - (8.38)(-22.59) + (-22.59)^2 + 3(5.59^2)]^{1/2} = 29.4 \text{ kpsi}$$

$$n_i = \frac{S_y}{\sigma'_i} = \frac{60}{29.4} = 2.04 \text{ Ans.}$$

Outer radius experiences a radial stress, σ_r

$$\begin{aligned} \sigma'_o &= \frac{1}{\sqrt{2}} [(-19.60 + 2.997)^2 + (-2.997 - 9.78)^2 + (9.78 + 19.60)^2 + 6(6.52)^2]^{1/2} \\ &= 27.9 \text{ kpsi} \end{aligned}$$

$$n_o = \frac{60}{27.9} = 2.15 \text{ Ans.}$$

5-40

$$\begin{aligned} \sigma_p &= \frac{1}{2} \left(2 \frac{K_I}{\sqrt{2\pi r}} \cos \frac{\theta}{2} \right) \pm \left[\left(\frac{K_I}{\sqrt{2\pi r}} \sin \frac{\theta}{2} \cos \frac{\theta}{2} \sin \frac{3\theta}{2} \right)^2 \right. \\ &\quad \left. + \left(\frac{K_I}{\sqrt{2\pi r}} \sin \frac{\theta}{2} \cos \frac{\theta}{2} \cos \frac{3\theta}{2} \right)^2 \right]^{1/2} \\ &= \frac{K_I}{\sqrt{2\pi r}} \left[\cos \frac{\theta}{2} \pm \left(\sin^2 \frac{\theta}{2} \cos^2 \frac{\theta}{2} \sin^2 \frac{3\theta}{2} + \sin^2 \frac{\theta}{2} \cos^2 \frac{\theta}{2} \cos^2 \frac{3\theta}{2} \right)^{1/2} \right] \\ &= \frac{K_I}{\sqrt{2\pi r}} \left(\cos \frac{\theta}{2} \pm \cos \frac{\theta}{2} \sin \frac{\theta}{2} \right) = \frac{K_I}{\sqrt{2\pi r}} \cos \frac{\theta}{2} \left(1 \pm \sin \frac{\theta}{2} \right) \end{aligned}$$

Plane stress: The third principal stress is zero and

$$\sigma_1 = \frac{K_I}{\sqrt{2\pi r}} \cos \frac{\theta}{2} \left(1 + \sin \frac{\theta}{2} \right), \quad \sigma_2 = \frac{K_I}{\sqrt{2\pi r}} \cos \frac{\theta}{2} \left(1 - \sin \frac{\theta}{2} \right), \quad \sigma_3 = 0 \text{ Ans.}$$

Plane strain: σ_1 and σ_2 equations still valid however,

$$\sigma_3 = \nu(\sigma_x + \sigma_y) = 2\nu \frac{K_I}{\sqrt{2\pi r}} \cos \frac{\theta}{2} \text{ Ans.}$$

5-41 For $\theta = 0$ and plane strain, the principal stress equations of Prob. 5-40 give

$$\sigma_1 = \sigma_2 = \frac{K_I}{\sqrt{2\pi r}}, \quad \sigma_3 = 2\nu \frac{K_I}{\sqrt{2\pi r}} = 2\nu\sigma_1$$

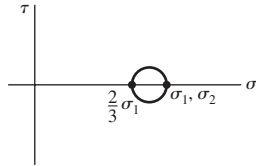
$$\begin{aligned} \text{(a) DE: } \frac{1}{\sqrt{2}} [(\sigma_1 - \sigma_1)^2 + (\sigma_1 - 2\nu\sigma_1)^2 + (2\nu\sigma_1 - \sigma_1)^2]^{1/2} &= S_y \\ \sigma_1 - 2\nu\sigma_1 &= S_y \end{aligned}$$

$$\text{For } \nu = \frac{1}{3}, \quad \left[1 - 2 \left(\frac{1}{3} \right) \right] \sigma_1 = S_y \Rightarrow \sigma_1 = 3S_y \text{ Ans.}$$

(b) MSS: $\sigma_1 - \sigma_3 = S_y \Rightarrow \sigma_1 - 2\nu\sigma_1 = S_y$

$$\nu = \frac{1}{3} \Rightarrow \sigma_1 = 3S_y \quad \text{Ans.}$$

$$\sigma_3 = \frac{2}{3}\sigma_1$$



Radius of largest circle

$$R = \frac{1}{2} \left[\sigma_1 - \frac{2}{3}\sigma_1 \right] = \frac{\sigma_1}{6}$$

5-42 (a) Ignoring stress concentration

$$F = S_y A = 160(4)(0.5) = 320 \text{ kips} \quad \text{Ans.}$$

(b) From Fig. 6-36: $h/b = 1$, $a/b = 0.625/4 = 0.1563$, $\beta = 1.3$

$$\text{Eq. (6-51)} \quad 70 = 1.3 \frac{F}{4(0.5)} \sqrt{\pi(0.625)}$$

$$F = 76.9 \text{ kips} \quad \text{Ans.}$$

5-43 Given: $a = 12.5 \text{ mm}$, $K_{Ic} = 80 \text{ MPa} \cdot \sqrt{m}$, $S_y = 1200 \text{ MPa}$, $S_{ut} = 1350 \text{ MPa}$

$$r_o = \frac{350}{2} = 175 \text{ mm}, \quad r_i = \frac{350 - 50}{2} = 150 \text{ mm}$$

$$a/(r_o - r_i) = \frac{12.5}{175 - 150} = 0.5$$

$$r_i/r_o = \frac{150}{175} = 0.857$$

Fig. 5-30: $\beta \doteq 2.5$

$$\text{Eq. (5-37):} \quad K_{Ic} = \beta\sigma\sqrt{\pi a}$$

$$80 = 2.5\sigma\sqrt{\pi(0.0125)}$$

$$\sigma = 161.5 \text{ MPa}$$

Eq. (3-50) at $r = r_o$:

$$\sigma_t = \frac{r_i^2 p_i}{r_o^2 - r_i^2} (2)$$

$$161.5 = \frac{150^2 p_i (2)}{175^2 - 150^2}$$

$$p_i = 29.2 \text{ MPa} \quad \text{Ans.}$$

5-44

- (a) First convert the data to radial dimensions to agree with the formulations of Fig. 3-33. Thus

$$r_o = 0.5625 \pm 0.001 \text{ in}$$

$$r_i = 0.1875 \pm 0.001 \text{ in}$$

$$R_o = 0.375 \pm 0.0002 \text{ in}$$

$$R_i = 0.376 \pm 0.0002 \text{ in}$$

The stochastic nature of the dimensions affects the $\delta = |\mathbf{R}_i| - |\mathbf{R}_o|$ relation in Eq. (3-57) but not the others. Set $R = (1/2)(R_i + R_o) = 0.3755$. From Eq. (3-57)

$$\mathbf{p} = \frac{E\delta}{R} \left[\frac{(r_o^2 - R^2)(R^2 - r_i^2)}{2R^2(r_o^2 - r_i^2)} \right]$$

Substituting and solving with $E = 30$ Mpsi gives

$$\mathbf{p} = 18.70(10^6) \delta$$

Since $\delta = \mathbf{R}_i - \mathbf{R}_o$

$$\bar{\delta} = \bar{R}_i - \bar{R}_o = 0.376 - 0.375 = 0.001 \text{ in}$$

and

$$\begin{aligned} \hat{\sigma}_\delta &= \left[\left(\frac{0.0002}{4} \right)^2 + \left(\frac{0.0002}{4} \right)^2 \right]^{1/2} \\ &= 0.000\,070\,7 \text{ in} \end{aligned}$$

Then

$$C_\delta = \frac{\hat{\sigma}_\delta}{\bar{\delta}} = \frac{0.000\,070\,7}{0.001} = 0.0707$$

The tangential inner-cylinder stress at the shrink-fit surface is given by

$$\begin{aligned} \sigma_{it} &= -\mathbf{p} \frac{\bar{R}^2 + \bar{r}_i^2}{\bar{R}^2 - \bar{r}_i^2} \\ &= -18.70(10^6) \delta \left(\frac{0.3755^2 + 0.1875^2}{0.3755^2 - 0.1875^2} \right) \\ &= -31.1(10^6) \delta \\ \bar{\sigma}_{it} &= -31.1(10^6) \bar{\delta} = -31.1(10^6)(0.001) \\ &= -31.1(10^3) \text{ psi} \end{aligned}$$

Also

$$\begin{aligned} \hat{\sigma}_{\sigma_{it}} &= |C_\delta \bar{\sigma}_{it}| = 0.0707(-31.1)10^3 \\ &= 2899 \text{ psi} \\ \sigma_{it} &= \mathbf{N}(-31\,100, 2899) \text{ psi} \quad \text{Ans.} \end{aligned}$$

(b) The tangential stress for the outer cylinder at the shrink-fit surface is given by

$$\begin{aligned}\sigma_{ot} &= \mathbf{p} \left(\frac{\bar{r}_o^2 + \bar{R}^2}{\bar{r}_o^2 - \bar{R}^2} \right) \\ &= 18.70(10^6) \delta \left(\frac{0.5625^2 + 0.3755^2}{0.5625^2 - 0.3755^2} \right) \\ &= 48.76(10^6) \delta \text{ psi} \\ \bar{\sigma}_{ot} &= 48.76(10^6)(0.001) = 48.76(10^3) \text{ psi} \\ \hat{\sigma}_{\sigma_{ot}} &= C_\delta \bar{\sigma}_{ot} = 0.0707(48.76)(10^3) = 34.45 \text{ psi} \\ \therefore \sigma_{ot} &= \mathbf{N}(48\ 760, 3445) \text{ psi} \quad \text{Ans.}\end{aligned}$$

5-45 From Prob. 5-44, at the fit surface $\sigma_{ot} = \mathbf{N}(48.8, 3.45)$ kpsi. The radial stress is the fit pressure which was found to be

$$\begin{aligned}\mathbf{p} &= 18.70(10^6) \delta \\ \bar{p} &= 18.70(10^6)(0.001) = 18.7(10^3) \text{ psi} \\ \hat{\sigma}_p &= C_\delta \bar{p} = 0.0707(18.70)(10^3) \\ &= 1322 \text{ psi}\end{aligned}$$

and so

$$\mathbf{p} = \mathbf{N}(18.7, 1.32) \text{ kpsi}$$

and

$$\sigma_{or} = -\mathbf{N}(18.7, 1.32) \text{ kpsi}$$

These represent the principal stresses. The von Mises stress is next assessed.

$$\begin{aligned}\bar{\sigma}_A &= 48.8 \text{ kpsi}, \quad \bar{\sigma}_B = -18.7 \text{ kpsi} \\ k &= \bar{\sigma}_B / \bar{\sigma}_A = -18.7 / 48.8 = -0.383 \\ \bar{\sigma}' &= \bar{\sigma}_A (1 - k + k^2)^{1/2} \\ &= 48.8 [1 - (-0.383) + (-0.383)^2]^{1/2} \\ &= 60.4 \text{ kpsi} \\ \hat{\sigma}_{\sigma'} &= C_p \bar{\sigma}' = 0.0707(60.4) = 4.27 \text{ kpsi}\end{aligned}$$

Using the interference equation

$$\begin{aligned}z &= -\frac{\bar{S} - \bar{\sigma}'}{(\hat{\sigma}_S^2 + \hat{\sigma}_{\sigma'}^2)^{1/2}} \\ &= -\frac{95.5 - 60.4}{[(6.59)^2 + (4.27)^2]^{1/2}} = -4.5 \\ p_f &= \alpha = 0.000\ 003\ 40,\end{aligned}$$

or about 3 chances in a million. *Ans.*

5-46

$$\sigma_t = \frac{\mathbf{p}d}{2t} = \frac{6000\mathbf{N}(1, 0.083\ 33)(0.75)}{2(0.125)}$$

$$= 18\mathbf{N}(1, 0.083\ 33) \text{ kpsi}$$

$$\sigma_l = \frac{\mathbf{p}d}{4t} = \frac{6000\mathbf{N}(1, 0.083\ 33)(0.75)}{4(0.125)}$$

$$= 9\mathbf{N}(1, 0.083\ 33) \text{ kpsi}$$

$$\sigma_r = -\mathbf{p} = -6000\mathbf{N}(1, 0.083\ 33) \text{ kpsi}$$

These three stresses are principal stresses whose variability is due to the loading. From Eq. (5-12), we find the von Mises stress to be

$$\sigma' = \left\{ \frac{(18 - 9)^2 + [9 - (-6)]^2 + (-6 - 18)^2}{2} \right\}^{1/2}$$

$$= 21.0 \text{ kpsi}$$

$$\hat{\sigma}_{\sigma'} = C_p \bar{\sigma}' = 0.083\ 33(21.0) = 1.75 \text{ kpsi}$$

$$z = -\frac{\bar{S} - \bar{\sigma}'}{(\hat{\sigma}_S^2 + \hat{\sigma}_{\sigma'}^2)^{1/2}}$$

$$= \frac{50 - 21.0}{(4.1^2 + 1.75^2)^{1/2}} = -6.5$$

The reliability is very high

$$R = 1 - \Phi(6.5) = 1 - 4.02(10^{-11}) \doteq 1 \quad \text{Ans.}$$

Chapter 6

Note to the instructor: Many of the problems in this chapter are carried over from the previous edition. The solutions have changed slightly due to some minor changes. First, the calculation of the endurance limit of a rotating-beam specimen S'_e is given by $S'_e = 0.5S_{ut}$ instead of $S'_e = 0.504S_{ut}$. Second, when the fatigue stress calculation is made for deterministic problems, only one approach is given, which uses the notch sensitivity factor, q , together with Eq. (6-32). Neuber's equation, Eq. (6-33), is simply another form of this. These changes were made to hopefully make the calculations less confusing, and diminish the idea that stress life calculations are precise.

6-1 $H_B = 490$

$$\text{Eq. (2-17): } S_{ut} = 0.495(490) = 242.6 \text{ kpsi} > 212 \text{ kpsi}$$

$$\text{Eq. (6-8): } S'_e = 100 \text{ kpsi}$$

$$\text{Table 6-2: } a = 1.34, \quad b = -0.085$$

$$\text{Eq. (6-19): } k_a = 1.34(242.6)^{-0.085} = 0.840$$

$$\text{Eq. (6-20): } k_b = \left(\frac{1/4}{0.3}\right)^{-0.107} = 1.02$$

$$\text{Eq. (6-18): } S_e = k_a k_b S'_e = 0.840(1.02)(100) = 85.7 \text{ kpsi} \quad \text{Ans.}$$

6-2

$$\text{(a) } S_{ut} = 68 \text{ kpsi}, \quad S'_e = 0.5(68) = 34 \text{ kpsi} \quad \text{Ans.}$$

$$\text{(b) } S_{ut} = 112 \text{ kpsi}, \quad S'_e = 0.5(112) = 56 \text{ kpsi} \quad \text{Ans.}$$

$$\text{(c) 2024T3 has no endurance limit} \quad \text{Ans.}$$

$$\text{(d) Eq. (6-8): } S'_e = 100 \text{ kpsi} \quad \text{Ans.}$$

6-3

$$\text{Eq. (2-11): } \sigma'_F = \sigma_0 \varepsilon^m = 115(0.90)^{0.22} = 112.4 \text{ kpsi}$$

$$\text{Eq. (6-8): } S'_e = 0.5(66.2) = 33.1 \text{ kpsi}$$

$$\text{Eq. (6-12): } b = -\frac{\log(112.4/33.1)}{\log(2 \cdot 10^6)} = -0.08426$$

$$\text{Eq. (6-10): } f = \frac{112.4}{66.2}(2 \cdot 10^3)^{-0.08426} = 0.8949$$

$$\text{Eq. (6-14): } a = \frac{[0.8949(66.2)]^2}{33.1} = 106.0 \text{ kpsi}$$

$$\text{Eq. (6-13): } S_f = aN^b = 106.0(12500)^{-0.08426} = 47.9 \text{ kpsi} \quad \text{Ans.}$$

$$\text{Eq. (6-16): } N = \left(\frac{\sigma_a}{a}\right)^{1/b} = \left(\frac{36}{106.0}\right)^{-1/0.08426} = 368250 \text{ cycles} \quad \text{Ans.}$$

6-4 From $S_f = aN^b$

$$\log S_f = \log a + b \log N$$

Substituting (1, S_{ut})

$$\log S_{ut} = \log a + b \log (1)$$

From which

$$a = S_{ut}$$

Substituting (10^3 , $f S_{ut}$) and $a = S_{ut}$

$$\log f S_{ut} = \log S_{ut} + b \log 10^3$$

From which

$$b = \frac{1}{3} \log f$$

$$\therefore S_f = S_{ut} N^{(\log f)/3} \quad 1 \leq N \leq 10^3$$

For 500 cycles as in Prob. 6-3

$$S_f \geq 66.2(500)^{(\log 0.8949)/3} = 59.9 \text{ kpsi} \quad \text{Ans.}$$

6-5 Read from graph: (10^3 , 90) and (10^6 , 50). From $S = aN^b$

$$\log S_1 = \log a + b \log N_1$$

$$\log S_2 = \log a + b \log N_2$$

From which

$$\begin{aligned} \log a &= \frac{\log S_1 \log N_2 - \log S_2 \log N_1}{\log N_2/N_1} \\ &= \frac{\log 90 \log 10^6 - \log 50 \log 10^3}{\log 10^6/10^3} \\ &= 2.2095 \end{aligned}$$

$$a = 10^{\log a} = 10^{2.2095} = 162.0$$

$$b = \frac{\log 50/90}{3} = -0.08509$$

$$(S_f)_{ax} = 162^{-0.08509} \quad 10^3 \leq N \leq 10^6 \text{ in kpsi} \quad \text{Ans.}$$

Check:

$$10^3(S_f)_{ax} = 162(10^3)^{-0.08509} = 90 \text{ kpsi}$$

$$10^6(S_f)_{ax} = 162(10^6)^{-0.08509} = 50 \text{ kpsi}$$

The end points agree.

6-6

Eq. (6-8): $S'_e = 0.5(710) = 355 \text{ MPa}$

Table 6-2: $a = 4.51, \quad b = -0.265$

Eq. (6-19): $k_a = 4.51(710)^{-0.265} = 0.792$

$$\text{Eq. (6-20): } k_b = \left(\frac{d}{7.62}\right)^{-0.107} = \left(\frac{32}{7.62}\right)^{-0.107} = 0.858$$

$$\text{Eq. (6-18): } S_e = k_a k_b S'_e = 0.792(0.858)(355) = 241 \text{ MPa } \textit{Ans.}$$

6-7 For AISI 4340 as forged steel,

$$\text{Eq. (6-8): } S_e = 100 \text{ kpsi}$$

$$\text{Table 6-2: } a = 39.9, \quad b = -0.995$$

$$\text{Eq. (6-19): } k_a = 39.9(260)^{-0.995} = 0.158$$

$$\text{Eq. (6-20): } k_b = \left(\frac{0.75}{0.30}\right)^{-0.107} = 0.907$$

Each of the other Marin factors is unity.

$$S_e = 0.158(0.907)(100) = 14.3 \text{ kpsi}$$

For AISI 1040:

$$S'_e = 0.5(113) = 56.5 \text{ kpsi}$$

$$k_a = 39.9(113)^{-0.995} = 0.362$$

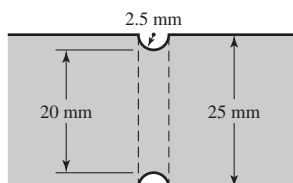
$$k_b = 0.907 \text{ (same as 4340)}$$

Each of the other Marin factors is unity.

$$S_e = 0.362(0.907)(56.5) = 18.6 \text{ kpsi}$$

Not only is AISI 1040 steel a contender, it has a superior endurance strength. Can you see why?

6-8



(a) For an AISI 1018 CD-machined steel, the strengths are

$$\text{Eq. (2-17): } S_{ut} = 440 \text{ MPa} \Rightarrow H_B = \frac{440}{3.41} = 129$$

$$S_y = 370 \text{ MPa}$$

$$S_{su} = 0.67(440) = 295 \text{ MPa}$$

$$\text{Fig. A-15-15: } \frac{r}{d} = \frac{2.5}{20} = 0.125, \quad \frac{D}{d} = \frac{25}{20} = 1.25, \quad K_{ts} = 1.4$$

$$\text{Fig. 6-21: } q_s = 0.94$$

$$\text{Eq. (6-32): } K_{fs} = 1 + 0.94(1.4 - 1) = 1.376$$

For a purely reversing torque of 200 N · m

$$\tau_{\max} = \frac{K_{fs} 16T}{\pi d^3} = \frac{1.376(16)(200 \times 10^3 \text{ N} \cdot \text{mm})}{\pi(20 \text{ mm})^3}$$

$$\tau_{\max} = 175.2 \text{ MPa} = \tau_a$$

$$S'_e = 0.5(440) = 220 \text{ MPa}$$

The Marin factors are

$$k_a = 4.51(440)^{-0.265} = 0.899$$

$$k_b = \left(\frac{20}{7.62}\right)^{-0.107} = 0.902$$

$$k_c = 0.59, \quad k_d = 1, \quad k_e = 1$$

Eq. (6-18): $S_e = 0.899(0.902)(0.59)(220) = 105.3 \text{ MPa}$

Eq. (6-14): $a = \frac{[0.9(295)]^2}{105.3} = 669.4$

Eq. (6-15): $b = -\frac{1}{3} \log \frac{0.9(295)}{105.3} = -0.13388$

Eq. (6-16): $N = \left(\frac{175.2}{669.4}\right)^{1/-0.13388}$

$$N = 22\,300 \text{ cycles } \textit{Ans.}$$

(b) For an operating temperature of 450°C, the temperature modification factor, from Table 6-4, is

$$k_d = 0.843$$

Thus $S_e = 0.899(0.902)(0.59)(0.843)(220) = 88.7 \text{ MPa}$

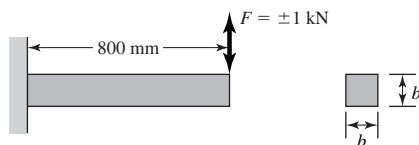
$$a = \frac{[0.9(295)]^2}{88.7} = 794.7$$

$$b = -\frac{1}{3} \log \frac{0.9(295)}{88.7} = -0.15871$$

$$N = \left(\frac{175.2}{794.7}\right)^{1/-0.15871}$$

$$N = 13\,700 \text{ cycles } \textit{Ans.}$$

6-9



$$f = 0.9$$

$$n = 1.5$$

$$N = 10^4 \text{ cycles}$$

For AISI 1045 HR steel, $S_{ut} = 570 \text{ MPa}$ and $S_y = 310 \text{ MPa}$

$$S'_e = 0.5(570 \text{ MPa}) = 285 \text{ MPa}$$

Find an initial guess based on yielding:

$$\sigma_a = \sigma_{\max} = \frac{Mc}{I} = \frac{M(b/2)}{b(b^3)/12} = \frac{6M}{b^3}$$

$$M_{\max} = (1 \text{ kN})(800 \text{ mm}) = 800 \text{ N} \cdot \text{m}$$

$$\sigma_{\max} = \frac{S_y}{n} \Rightarrow \frac{6(800 \times 10^3 \text{ N} \cdot \text{mm})}{b^3} = \frac{310 \text{ N/mm}^2}{1.5}$$

$$b = 28.5 \text{ mm}$$

Eq. (6-25): $d_e = 0.808b$

Eq. (6-20): $k_b = \left(\frac{0.808b}{7.62}\right)^{-0.107} = 1.2714b^{-0.107}$

$$k_b = 0.888$$

The remaining Marin factors are

$$k_a = 57.7(570)^{-0.718} = 0.606$$

$$k_c = k_d = k_e = k_f = 1$$

Eq. (6-18): $S_e = 0.606(0.888)(285) = 153.4 \text{ MPa}$

Eq. (6-14): $a = \frac{[0.9(570)]^2}{153.4} = 1715.6$

Eq. (6-15): $b = -\frac{1}{3} \log \frac{0.9(570)}{153.4} = -0.17476$

Eq. (6-13): $S_f = aN^b = 1715.6[(10^4)^{-0.17476}] = 343.1 \text{ MPa}$

$$n = \frac{S_f}{\sigma_a} \quad \text{or} \quad \sigma_a = \frac{S_f}{n}$$

$$\frac{6(800 \times 10^3)}{b^3} = \frac{343.1}{1.5} \Rightarrow b = 27.6 \text{ mm}$$

Check values for k_b , S_e , etc.

$$k_b = 1.2714(27.6)^{-0.107} = 0.891$$

$$S_e = 0.606(0.891)(285) = 153.9 \text{ MPa}$$

$$a = \frac{[0.9(570)]^2}{153.9} = 1710$$

$$b = -\frac{1}{3} \log \frac{0.9(570)}{153.9} = -0.17429$$

$$S_f = 1710[(10^4)^{-0.17429}] = 343.4 \text{ MPa}$$

$$\frac{6(800 \times 10^3)}{b^3} = \frac{343.4}{1.5}$$

$$b = 27.6 \text{ mm} \quad \text{Ans.}$$

6-10

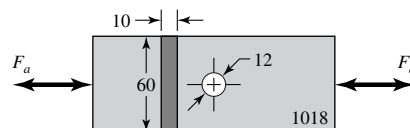


Table A-20: $S_{ut} = 440 \text{ MPa}$, $S_y = 370 \text{ MPa}$

$$S'_e = 0.5(440) = 220 \text{ MPa}$$

Table 6-2: $k_a = 4.51(440)^{-0.265} = 0.899$

$$k_b = 1 \quad (\text{axial loading})$$

Eq. (6-26): $k_c = 0.85$

$$S_e = 0.899(1)(0.85)(220) = 168.1 \text{ MPa}$$

Table A-15-1: $d/w = 12/60 = 0.2$, $K_t = 2.5$

From Fig. 6-20, $q \doteq 0.82$

Eq. (6-32): $K_f = 1 + 0.82(2.5 - 1) = 2.23$

$$\sigma_a = K_f \frac{F_a}{A} \Rightarrow \frac{S_e}{n_f} = \frac{2.23 F_a}{10(60 - 12)} = \frac{168.1}{1.8}$$

$$F_a = 20\,100 \text{ N} = 20.1 \text{ kN} \quad \text{Ans.}$$

$$\frac{F_a}{A} = \frac{S_y}{n_y} \Rightarrow \frac{F_a}{10(60 - 12)} = \frac{370}{1.8}$$

$$F_a = 98\,700 \text{ N} = 98.7 \text{ kN} \quad \text{Ans.}$$

Largest force amplitude is 20.1 kN. *Ans.*

6-11 A priori design decisions:

The design decision will be: d

Material and condition: 1095 HR and from Table A-20 $S_{ut} = 120$, $S_y = 66 \text{ kpsi}$.

Design factor: $n_f = 1.6$ per problem statement.

Life: $(1150)(3) = 3450$ cycles

Function: carry 10 000 lbf load

Preliminaries to iterative solution:

$$S'_e = 0.5(120) = 60 \text{ kpsi}$$

$$k_a = 2.70(120)^{-0.265} = 0.759$$

$$\frac{I}{c} = \frac{\pi d^3}{32} = 0.098\,17d^3$$

$$M(\text{crit.}) = \left(\frac{6}{24}\right)(10\,000)(12) = 30\,000 \text{ lbf} \cdot \text{in}$$

The critical location is in the middle of the shaft at the shoulder. From Fig. A-15-9: $D/d = 1.5$, $r/d = 0.10$, and $K_t = 1.68$. With no direct information concerning f , use $f = 0.9$.

For an initial trial, set $d = 2.00 \text{ in}$

$$k_b = \left(\frac{2.00}{0.30}\right)^{-0.107} = 0.816$$

$$S_e = 0.759(0.816)(60) = 37.2 \text{ kpsi}$$

$$a = \frac{[0.9(120)]^2}{37.2} = 313.5$$

$$b = -\frac{1}{3} \log \frac{0.9(120)}{37.2} = -0.15429$$

$$S_f = 313.5(3450)^{-0.15429} = 89.2 \text{ kpsi}$$

$$\sigma_0 = \frac{M}{I/c} = \frac{30}{0.09817d^3} = \frac{305.6}{d^3}$$

$$= \frac{305.6}{2^3} = 38.2 \text{ kpsi}$$

$$r = \frac{d}{10} = \frac{2}{10} = 0.2$$

Fig. 6-20: $q \doteq 0.87$

Eq. (6-32): $K_f \doteq 1 + 0.87(1.68 - 1) = 1.59$

$$\sigma_a = K_f \sigma_0 = 1.59(38.2) = 60.7 \text{ kpsi}$$

$$n_f = \frac{S_f}{\sigma_a} = \frac{89.2}{60.7} = 1.47$$

Design is adequate unless more uncertainty prevails.

Choose $d = 2.00$ in *Ans.*

6-12

Yield: $\sigma'_{\max} = [172^2 + 3(103^2)]^{1/2} = 247.8 \text{ kpsi}$

$$n_y = S_y / \sigma'_{\max} = 413 / 247.8 = 1.67 \text{ Ans.}$$

$$\sigma'_a = 172 \text{ MPa} \quad \sigma'_m = \sqrt{3} \tau_m = \sqrt{3}(103) = 178.4 \text{ MPa}$$

(a) Modified Goodman, Table 6-6

$$n_f = \frac{1}{(172/276) + (178.4/551)} = 1.06 \text{ Ans.}$$

(b) Gerber, Table 6-7

$$n_f = \frac{1}{2} \left(\frac{551}{178.4}\right)^2 \left(\frac{172}{276}\right) \left\{ -1 + \sqrt{1 + \left[\frac{2(178.4)(276)}{551(172)}\right]^2} \right\} = 1.31 \text{ Ans.}$$

(c) ASME-Elliptic, Table 6-8

$$n_f = \left[\frac{1}{(172/276)^2 + (178.4/413)^2} \right]^{1/2} = 1.32 \text{ Ans.}$$

6-13

Yield: $\sigma'_{\max} = [69^2 + 3(138)^2]^{1/2} = 248.8 \text{ MPa}$

$$n_y = \frac{S_y}{\sigma'_{\max}} = \frac{413}{248.8} = 1.66 \text{ Ans.}$$

$$\sigma'_a = 69 \text{ MPa}, \quad \sigma'_m = \sqrt{3}(138) = 239 \text{ MPa}$$

(a) Modified Goodman, Table 6-6

$$n_f = \frac{1}{(69/276) + (239/551)} = 1.46 \text{ Ans.}$$

(b) Gerber, Table 6-7

$$n_f = \frac{1}{2} \left(\frac{551}{239} \right)^2 \left(\frac{69}{276} \right) \left\{ -1 + \sqrt{1 + \left[\frac{2(239)(276)}{551(69)} \right]^2} \right\} = 1.73 \text{ Ans.}$$

(c) ASME-Elliptic, Table 6-8

$$n_f = \left[\frac{1}{(69/276)^2 + (239/413)^2} \right]^{1/2} = 1.59 \text{ Ans.}$$

6-14

Yield: $\sigma'_{\max} = [83^2 + 3(103 + 69)^2]^{1/2} = 309.2 \text{ MPa}$

$$n_y = \frac{S_y}{\sigma'_{\max}} = \frac{413}{309.3} = 1.34 \text{ Ans.}$$

$$\sigma'_a = \sqrt{\sigma_a^2 + 3\tau_a^2} = \sqrt{83^2 + 3(69)^2} = 145.5 \text{ MPa}, \quad \sigma'_m = \sqrt{3}(103) = 178.4 \text{ MPa}$$

(a) Modified Goodman, Table 6-6

$$n_f = \frac{1}{(145.5/276) + (178.4/551)} = 1.18 \text{ Ans.}$$

(b) Gerber, Table 6-7

$$n_f = \frac{1}{2} \left(\frac{551}{178.4} \right)^2 \left(\frac{145.5}{276} \right) \left\{ -1 + \sqrt{1 + \left[\frac{2(178.4)(276)}{551(145.5)} \right]^2} \right\} = 1.47 \text{ Ans.}$$

(c) ASME-Elliptic, Table 6-8

$$n_f = \left[\frac{1}{(145.5/276)^2 + (178.4/413)^2} \right]^{1/2} = 1.47 \text{ Ans.}$$

6-15

$$\sigma'_{\max} = \sigma'_a = \sqrt{3}(207) = 358.5 \text{ MPa}, \quad \sigma'_m = 0$$

Yield: $358.5 = \frac{413}{n_y} \Rightarrow n_y = 1.15 \text{ Ans.}$

(a) Modified Goodman, Table 6-6

$$n_f = \frac{1}{(358.5/276)} = 0.77 \text{ Ans.}$$

(b) Gerber criterion of Table 6-7 does not work; therefore use Eq. (6-47).

$$n_f \frac{\sigma_a}{S_e} = 1 \Rightarrow n_f = \frac{S_e}{\sigma_a} = \frac{276}{358.5} = 0.77 \text{ Ans.}$$

(c) ASME-Elliptic, Table 6-8

$$n_f = \sqrt{\left(\frac{1}{358.5/276}\right)^2} = 0.77 \text{ Ans.}$$

Let $f = 0.9$ to assess the cycles to failure by fatigue

Eq. (6-14): $a = \frac{[0.9(551)]^2}{276} = 891.0 \text{ MPa}$

Eq. (6-15): $b = -\frac{1}{3} \log \frac{0.9(551)}{276} = -0.084828$

Eq. (6-16): $N = \left(\frac{358.5}{891.0}\right)^{-1/0.084828} = 45\,800 \text{ cycles Ans.}$

6-16

$$\sigma'_{\max} = [103^2 + 3(103)^2]^{1/2} = 206 \text{ MPa}$$

$$n_y = \frac{S_y}{\sigma'_{\max}} = \frac{413}{206} = 2.00 \text{ Ans.}$$

$$\sigma'_a = \sqrt{3}(103) = 178.4 \text{ MPa}, \quad \sigma'_m = 103 \text{ MPa}$$

(a) Modified Goodman, Table 7-9

$$n_f = \frac{1}{(178.4/276) + (103/551)} = 1.20 \text{ Ans.}$$

(b) Gerber, Table 7-10

$$n_f = \frac{1}{2} \left(\frac{551}{103}\right)^2 \left(\frac{178.4}{276}\right) \left\{ -1 + \sqrt{1 + \left[\frac{2(103)(276)}{551(178.4)}\right]^2} \right\} = 1.44 \text{ Ans.}$$

(c) ASME-Elliptic, Table 7-11

$$n_f = \left[\frac{1}{(178.4/276)^2 + (103/413)^2} \right]^{1/2} = 1.44 \text{ Ans.}$$

6-17 Table A-20: $S_{ut} = 64$ kpsi, $S_y = 54$ kpsi

$$A = 0.375(1 - 0.25) = 0.2813 \text{ in}^2$$

$$\sigma_{\max} = \frac{F_{\max}}{A} = \frac{3000}{0.2813}(10^{-3}) = 10.67 \text{ kpsi}$$

$$n_y = \frac{54}{10.67} = 5.06 \text{ Ans.}$$

$$S'_e = 0.5(64) = 32 \text{ kpsi}$$

$$k_a = 2.70(64)^{-0.265} = 0.897$$

$$k_b = 1, \quad k_c = 0.85$$

$$S_e = 0.897(1)(0.85)(32) = 24.4 \text{ kpsi}$$

Table A-15-1: $w = 1$ in, $d = 1/4$ in, $d/w = 0.25 \therefore K_t = 2.45$.

Fig. 6-20, with $r = 0.125$ in, $q \doteq 0.8$

Eq. (6-32): $K_f = 1 + 0.8(2.45 - 1) = 2.16$

$$\begin{aligned} \sigma_a &= K_f \left| \frac{F_{\max} - F_{\min}}{2A} \right| \\ &= 2.16 \left| \frac{3.000 - 0.800}{2(0.2813)} \right| = 8.45 \text{ kpsi} \end{aligned}$$

$$\begin{aligned} \sigma_m &= K_f \frac{F_{\max} + F_{\min}}{2A} \\ &= 2.16 \left[\frac{3.000 + 0.800}{2(0.2813)} \right] = 14.6 \text{ kpsi} \end{aligned}$$

(a) Gerber, Table 6-7

$$\begin{aligned} n_f &= \frac{1}{2} \left(\frac{64}{14.6} \right)^2 \left(\frac{8.45}{24.4} \right) \left[-1 + \sqrt{1 + \left(\frac{2(14.6)(24.4)}{8.45(64)} \right)^2} \right] \\ &= 2.17 \text{ Ans.} \end{aligned}$$

(b) ASME-Elliptic, Table 6-8

$$n_f = \sqrt{\frac{1}{(8.45/24.4)^2 + (14.6/54)^2}} = 2.28 \text{ Ans.}$$

6-18 Referring to the solution of Prob. 6-17, for load fluctuations of -800 to 3000 lbf

$$\sigma_a = 2.16 \left| \frac{3.000 - (-0.800)}{2(0.2813)} \right| = 14.59 \text{ kpsi}$$

$$\sigma_m = 2.16 \left| \frac{3.000 + (-0.800)}{2(0.2813)} \right| = 8.45 \text{ kpsi}$$

(a) Table 6-7, DE-Gerber

$$n_f = \frac{1}{2} \left(\frac{64}{8.45} \right)^2 \left(\frac{14.59}{24.4} \right) \left[-1 + \sqrt{1 + \left(\frac{2(8.45)(24.4)}{64(14.59)} \right)^2} \right] = 1.60 \quad \text{Ans.}$$

(b) Table 6-8, DE-Elliptic

$$n_f = \sqrt{\frac{1}{(14.59/24.4)^2 + (8.45/54)^2}} = 1.62 \quad \text{Ans.}$$

6-19 Referring to the solution of Prob. 6-17, for load fluctuations of 800 to -3000 lbf

$$\sigma_a = 2.16 \left| \frac{0.800 - (-3.000)}{2(0.2813)} \right| = 14.59 \text{ kpsi}$$

$$\sigma_m = 2.16 \left[\frac{0.800 + (-3.000)}{2(0.2813)} \right] = -8.45 \text{ kpsi}$$

(a) We have a compressive midrange stress for which the failure locus is horizontal at the S_e level.

$$n_f = \frac{S_e}{\sigma_a} = \frac{24.4}{14.59} = 1.67 \quad \text{Ans.}$$

(b) Same as (a)

$$n_f = \frac{S_e}{\sigma_a} = \frac{24.4}{14.59} = 1.67 \quad \text{Ans.}$$

6-20

$$S_{ut} = 0.495(380) = 188.1 \text{ kpsi}$$

$$S'_e = 0.5(188.1) = 94.05 \text{ kpsi}$$

$$k_a = 14.4(188.1)^{-0.718} = 0.335$$

For a non-rotating round bar in bending, Eq. (6-24) gives: $d_e = 0.370d = 0.370(3/8) = 0.1388$ in

$$k_b = \left(\frac{0.1388}{0.3} \right)^{-0.107} = 1.086$$

$$S_e = 0.335(1.086)(94.05) = 34.22 \text{ kpsi}$$

$$F_a = \frac{30 - 15}{2} = 7.5 \text{ lbf}, \quad F_m = \frac{30 + 15}{2} = 22.5 \text{ lbf}$$

$$\sigma_m = \frac{32M_m}{\pi d^3} = \frac{32(22.5)(16)}{\pi(0.375^3)}(10^{-3}) = 69.54 \text{ kpsi}$$

$$\sigma_a = \frac{32(7.5)(16)}{\pi(0.375^3)}(10^{-3}) = 23.18 \text{ kpsi}$$

$$r = \frac{23.18}{69.54} = 0.333$$

(a) Modified Goodman, Table 6-6

$$n_f = \frac{1}{(23.18/34.22) + (69.54/188.1)} = 0.955$$

Since finite failure is predicted, proceed to calculate N

From Fig. 6-18, for $S_{ut} = 188.1$ kpsi, $f = 0.778$

$$\text{Eq. (6-14):} \quad a = \frac{[0.7781(188.1)]^2}{34.22} = 625.8 \text{ kpsi}$$

$$\text{Eq. (6-15):} \quad b = -\frac{1}{3} \log \frac{0.778(188.1)}{34.22} = -0.21036$$

$$\frac{\sigma_a}{S_f} + \frac{\sigma_m}{S_{ut}} = 1 \Rightarrow S_f = \frac{\sigma_a}{1 - (\sigma_m/S_{ut})} = \frac{23.18}{1 - (69.54/188.1)} = 36.78 \text{ kpsi}$$

Eq. (7-15) with $\sigma_a = S_f$

$$N = \left(\frac{36.78}{625.8} \right)^{1/-0.21036} = 710\,000 \text{ cycles } \textit{Ans.}$$

(b) Gerber, Table 6-7

$$n_f = \frac{1}{2} \left(\frac{188.1}{69.54} \right)^2 \left(\frac{23.18}{34.22} \right) \left\{ -1 + \sqrt{1 + \left[\frac{2(69.54)(34.22)}{188.1(23.18)} \right]^2} \right\}$$

$$= 1.20 \quad \text{Thus, infinite life is predicted } (N \geq 10^6 \text{ cycles}). \quad \textit{Ans.}$$

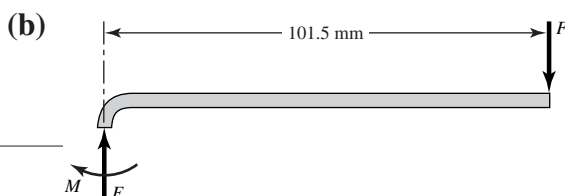
6-21

$$(a) \quad I = \frac{1}{12}(18)(3^3) = 40.5 \text{ mm}^4$$

$$y = \frac{Fl^3}{3EI} \Rightarrow F = \frac{3EIy}{l^3}$$

$$F_{\min} = \frac{3(207)(10^9)(40.5)(10^{-12})(2)(10^{-3})}{(100^3)(10^{-9})} = 50.3 \text{ N } \textit{Ans.}$$

$$F_{\max} = \frac{6}{2}(50.3) = 150.9 \text{ N } \textit{Ans.}$$



$$M = 0.1015F \text{ N} \cdot \text{m}$$

$$A = 3(18) = 54 \text{ mm}^2$$

$$\text{Curved beam: } r_n = \frac{h}{\ln(r_o/r_i)} = \frac{3}{\ln(6/3)} = 4.3281 \text{ mm}$$

$$r_c = 4.5 \text{ mm, } e = r_c - r_n = 4.5 - 4.3281 = 0.1719 \text{ mm}$$

$$\sigma_i = -\frac{Mc_i}{Aer_i} - \frac{F}{A} = -\frac{(0.1015F)(1.5 - 0.1719)}{54(0.1719)(3)(10^{-3})} - \frac{F}{54} = -4.859F \text{ MPa}$$

$$\sigma_o = \frac{Mc_o}{Aer_o} - \frac{F}{A} = \frac{(0.1015F)(1.5 + 0.1719)}{54(0.1719)(6)(10^{-3})} - \frac{F}{54} = 3.028F \text{ MPa}$$

$$(\sigma_i)_{\min} = -4.859(150.9) = -733.2 \text{ MPa}$$

$$(\sigma_i)_{\max} = -4.859(50.3) = -244.4 \text{ MPa}$$

$$(\sigma_o)_{\max} = 3.028(150.9) = 456.9 \text{ MPa}$$

$$(\sigma_o)_{\min} = 3.028(50.3) = 152.3 \text{ MPa}$$

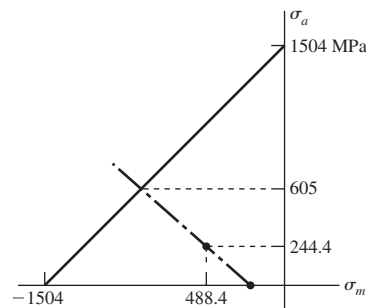
$$\text{Eq. (2-17)} \quad S_{ut} = 3.41(490) = 1671 \text{ MPa}$$

Per the problem statement, estimate the yield as $S_y = 0.9S_{ut} = 0.9(1671) = 1504 \text{ MPa}$. Then from Eq. (6-8), $S'_e = 700 \text{ MPa}$; Eq. (6-19), $k_a = 1.58(1671)^{-0.085} = 0.841$; Eq. (6-25) $d_e = 0.808[18(3)]^{1/2} = 5.938 \text{ mm}$; and Eq. (6-20), $k_b = (5.938/7.62)^{-0.107} = 1.027$.

$$S_e = 0.841(1.027)(700) = 605 \text{ MPa}$$

$$\text{At Inner Radius } (\sigma_i)_a = \left| \frac{-733.2 + 244.4}{2} \right| = 244.4 \text{ MPa}$$

$$(\sigma_i)_m = \frac{-733.2 - 244.4}{2} = -488.8 \text{ MPa}$$



$$\text{Load line: } \sigma_m = -244.4 - \sigma_a$$

$$\text{Langer (yield) line: } \sigma_m = \sigma_a - 1504 = -244.4 - \sigma_a$$

$$\text{Intersection: } \sigma_a = 629.8 \text{ MPa, } \sigma_m = -874.2 \text{ MPa}$$

(Note that σ_a is more than 605 MPa)

$$\text{Yield: } n_y = \frac{629.8}{244.4} = 2.58$$

Fatigue: $n_f = \frac{605}{244.4} = 2.48$ Thus, the spring is likely to fail in fatigue at the inner radius. *Ans.*

At Outer Radius

$$(\sigma_o)_a = \frac{456.9 - 152.3}{2} = 152.3 \text{ MPa}$$

$$(\sigma_o)_m = \frac{456.9 + 152.3}{2} = 304.6 \text{ MPa}$$

Yield load line: $\sigma_m = 152.3 + \sigma_a$

Langer line: $\sigma_m = 1504 - \sigma_a = 152.3 + \sigma_a$

Intersection: $\sigma_a = 675.9 \text{ MPa}, \quad \sigma_m = 828.2 \text{ MPa}$

$$n_y = \frac{675.9}{152.3} = 4.44$$

Fatigue line: $\sigma_a = [1 - (\sigma_m/S_{ut})^2]S_e = \sigma_m - 152.3$

$$605 \left[1 - \left(\frac{\sigma_m}{1671} \right)^2 \right] = \sigma_m - 152.3$$

$$\sigma_m^2 + 4615.3\sigma_m - 3.4951(10^6) = 0$$

$$\sigma_m = \frac{-4615.3 + \sqrt{4615.3^2 + 4(3.4951)(10^6)}}{2} = 662.2 \text{ MPa}$$

$$\sigma_a = 662.2 - 152.3 = 509.9 \text{ MPa}$$

$$n_f = \frac{509.9}{152.3} = 3.35$$

Thus, the spring is not likely to fail in fatigue at the outer radius. *Ans.*

6-22 The solution at the inner radius is the same as in Prob. 6-21. At the outer radius, the yield solution is the same.

Fatigue line: $\sigma_a = \left(1 - \frac{\sigma_m}{S_{ut}} \right) S_e = \sigma_m - 152.3$

$$605 \left(1 - \frac{\sigma_m}{1671} \right) = \sigma_m - 152.3$$

$$1.362\sigma_m = 757.3 \quad \Rightarrow \quad \sigma_m = 556.0 \text{ MPa}$$

$$\sigma_a = 556.0 - 152.3 = 403.7 \text{ MPa}$$

$$n_f = \frac{403.7}{152.3} = 2.65 \quad \text{Ans.}$$

6-23 Preliminaries:

Table A-20: $S_{ut} = 64$ kpsi, $S_y = 54$ kpsi
 $S'_e = 0.5(64) = 32$ kpsi
 $k_a = 2.70(64)^{-0.265} = 0.897$
 $k_b = 1$
 $k_c = 0.85$
 $S_e = 0.897(1)(0.85)(32) = 24.4$ kpsi

Fillet:

Fig. A-15-5: $D = 3.75$ in, $d = 2.5$ in, $D/d = 3.75/2.5 = 1.5$, and $r/d = 0.25/2.5 = 0.10$
 $\therefore K_t = 2.1$. Fig. 6-20 with $r = 0.25$ in, $q \doteq 0.82$

Eq. (6-32): $K_f = 1 + 0.82(2.1 - 1) = 1.90$

$$\sigma_{\max} = \frac{4}{2.5(0.5)} = 3.2 \text{ kpsi}$$

$$\sigma_{\min} = \frac{-16}{2.5(0.5)} = -12.8 \text{ kpsi}$$

$$\sigma_a = 1.90 \left| \frac{3.2 - (-12.8)}{2} \right| = 15.2 \text{ kpsi}$$

$$\sigma_m = 1.90 \left[\frac{3.2 + (-12.8)}{2} \right] = -9.12 \text{ kpsi}$$

$$n_y = \left| \frac{S_y}{\sigma_{\min}} \right| = \left| \frac{54}{-12.8} \right| = 4.22$$

Since the midrange stress is negative,

$$S_a = S_e = 24.4 \text{ kpsi}$$

$$n_f = \frac{S_a}{\sigma_a} = \frac{24.4}{15.2} = 1.61$$

Hole:

Fig. A-15-1: $d/w = 0.75/3.75 = 0.20$, $K_t = 2.5$. Fig. 6-20, with $r = 0.375$ in, $q \doteq 0.85$

Eq. (6-32): $K_f = 1 + 0.85(2.5 - 1) = 2.28$

$$\sigma_{\max} = \frac{4}{0.5(3.75 - 0.75)} = 2.67 \text{ kpsi}$$

$$\sigma_{\min} = \frac{-16}{0.5(3.75 - 0.75)} = -10.67 \text{ kpsi}$$

$$\sigma_a = 2.28 \left| \frac{2.67 - (-10.67)}{2} \right| = 15.2 \text{ kpsi}$$

$$\sigma_m = 2.28 \frac{2.67 + (-10.67)}{2} = -9.12 \text{ kpsi}$$

Since the midrange stress is negative,

$$n_y = \left| \frac{S_y}{\sigma_{\min}} \right| = \left| \frac{54}{-10.67} \right| = 5.06$$

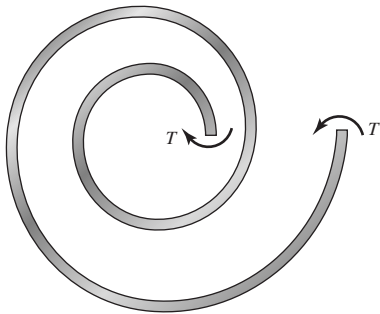
$$S_a = S_e = 24.4 \text{ kpsi}$$

$$n_f = \frac{S_a}{\sigma_a} = \frac{24.4}{15.2} = 1.61$$

Thus the design is controlled by the threat of fatigue equally at the fillet and the hole; the minimum factor of safety is $n_f = 1.61$. *Ans.*

6-24

(a)



Curved beam in pure bending where $M = -T$ throughout. The maximum stress will occur at the inner fiber where $r_c = 20 \text{ mm}$, but will be compressive. The maximum tensile stress will occur at the outer fiber where $r_c = 60 \text{ mm}$. Why?

Inner fiber where $r_c = 20 \text{ mm}$

$$r_n = \frac{h}{\ln(r_o/r_i)} = \frac{5}{\ln(22.5/17.5)} = 19.8954 \text{ mm}$$

$$e = 20 - 19.8954 = 0.1046 \text{ mm}$$

$$c_i = 19.8954 - 17.5 = 2.395 \text{ mm}$$

$$A = 25 \text{ mm}^2$$

$$\sigma_i = \frac{Mc_i}{Aer_i} = \frac{-T(2.395)10^{-3}}{25(10^{-6})0.1046(10^{-3})17.5(10^{-3})}(10^{-6}) = -52.34 T \quad (1)$$

where T is in $\text{N} \cdot \text{m}$, and σ_i is in MPa .

$$\sigma_m = \frac{1}{2}(-52.34T) = -26.17T, \quad \sigma_a = 26.17T$$

For the endurance limit, $S'_e = 0.5(770) = 385 \text{ MPa}$

$$k_a = 4.51(770)^{-0.265} = 0.775$$

$$d_e = 0.808[5(5)]^{1/2} = 4.04 \text{ mm}$$

$$k_b = (4.04/7.62)^{-0.107} = 1.07$$

$$S_e = 0.775(1.07)385 = 319.3 \text{ MPa}$$

For a compressive midrange component, $\sigma_a = S_e/n_f$. Thus,

$$26.17T = 319.3/3 \Rightarrow T = 4.07 \text{ N} \cdot \text{m}$$

Outer fiber where $r_c = 60 \text{ mm}$

$$r_n = \frac{5}{\ln(62.5/57.5)} = 59.96526 \text{ mm}$$

$$e = 60 - 59.96526 = 0.03474 \text{ mm}$$

$$c_o = 62.5 - 59.96526 = 2.535 \text{ mm}$$

$$\sigma_o = -\frac{Mc_i}{Aer_i} = -\frac{-T(2.535)10^{-3}}{25(10^{-6})0.03474(10^{-3})62.5(10^{-3})}(10^{-6}) = 46.7 T$$

Comparing this with Eq. (1), we see that it is less in magnitude, but the midrange component is *tension*.

$$\sigma_a = \sigma_m = \frac{1}{2}(46.7T) = 23.35T$$

Using Eq. (6-46), for modified Goodman, we have

$$\frac{23.35T}{319.3} + \frac{23.35T}{770} = \frac{1}{3} \Rightarrow T = 3.22 \text{ N} \cdot \text{m} \quad \text{Ans.}$$

(b) Gerber, Eq. (6-47), at the outer fiber,

$$\frac{3(23.35T)}{319.3} + \left[\frac{3(23.35T)}{770} \right]^2 = 1$$

$$\text{reduces to} \quad T^2 + 26.51T - 120.83 = 0$$

$$T = \frac{1}{2} \left(-26.51 + \sqrt{26.51^2 + 4(120.83)} \right) = 3.96 \text{ N} \cdot \text{m} \quad \text{Ans.}$$

(c) To guard against yield, use T of part (b) and the inner stress.

$$n_y = \frac{420}{52.34(3.96)} = 2.03 \quad \text{Ans.}$$

6-25 From Prob. 6-24, $S_e = 319.3 \text{ MPa}$, $S_y = 420 \text{ MPa}$, and $S_{ut} = 770 \text{ MPa}$

(a) Assuming the beam is straight,

$$\sigma_{\max} = \frac{6M}{bh^2} = \frac{6T}{5^3[(10^{-3})^3]} = 48(10^6)T$$

$$\text{Goodman:} \quad \frac{24T}{319.3} + \frac{24T}{770} = \frac{1}{3} \Rightarrow T = 3.13 \text{ N} \cdot \text{m} \quad \text{Ans.}$$

$$\text{(b) Gerber:} \quad \frac{3(24)T}{319.3} + \left[\frac{3(24)T}{770} \right]^2 = 1$$

$$T^2 + 25.79T - 114.37 = 1$$

$$T = \frac{1}{2} \left[-25.79 + \sqrt{25.79^2 + 4(114.37)} \right] = 3.86 \text{ N} \cdot \text{m} \quad \text{Ans.}$$

(c) Using $\sigma_{\max} = 52.34(10^6)T$ from Prob. 6-24,

$$n_y = \frac{420}{52.34(3.86)} = 2.08 \quad \text{Ans.}$$

6-26

(a)
$$\tau_{\max} = \frac{16K_{fs}T_{\max}}{\pi d^3}$$

Fig. 6-21 for $H_B > 200$, $r = 3$ mm, $q_s \doteq 1$

$$K_{fs} = 1 + q_s(K_{ts} - 1)$$

$$K_{fs} = 1 + 1(1.6 - 1) = 1.6$$

$$T_{\max} = 2000(0.05) = 100 \text{ N} \cdot \text{m}, \quad T_{\min} = \frac{500}{2000}(100) = 25 \text{ N} \cdot \text{m}$$

$$\tau_{\max} = \frac{16(1.6)(100)(10^{-6})}{\pi(0.02)^3} = 101.9 \text{ MPa}$$

$$\tau_{\min} = \frac{500}{2000}(101.9) = 25.46 \text{ MPa}$$

$$\tau_m = \frac{1}{2}(101.9 + 25.46) = 63.68 \text{ MPa}$$

$$\tau_a = \frac{1}{2}(101.9 - 25.46) = 38.22 \text{ MPa}$$

$$S_{su} = 0.67S_{ut} = 0.67(320) = 214.4 \text{ MPa}$$

$$S_{sy} = 0.577S_y = 0.577(180) = 103.9 \text{ MPa}$$

$$S'_e = 0.5(320) = 160 \text{ MPa}$$

$$k_a = 57.7(320)^{-0.718} = 0.917$$

$$d_e = 0.370(20) = 7.4 \text{ mm}$$

$$k_b = \left(\frac{7.4}{7.62}\right)^{-0.107} = 1.003$$

$$k_c = 0.59$$

$$S_e = 0.917(1.003)(0.59)(160) = 86.8 \text{ MPa}$$

Modified Goodman, Table 6-6

$$n_f = \frac{1}{(\tau_a/S_e) + (\tau_m/S_{su})} = \frac{1}{(38.22/86.8) + (63.68/214.4)} = 1.36 \quad \text{Ans.}$$

(b) Gerber, Table 6-7

$$\begin{aligned} n_f &= \frac{1}{2} \left(\frac{S_{su}}{\tau_m} \right)^2 \frac{\tau_a}{S_e} \left[-1 + \sqrt{1 + \left(\frac{2\tau_m S_e}{S_{su} \tau_a} \right)^2} \right] \\ &= \frac{1}{2} \left(\frac{214.4}{63.68} \right)^2 \frac{38.22}{86.8} \left\{ -1 + \sqrt{1 + \left[\frac{2(63.68)(86.8)}{214.4(38.22)} \right]^2} \right\} = 1.70 \quad \text{Ans.} \end{aligned}$$

6-27 $S_y = 800 \text{ MPa}$, $S_{ut} = 1000 \text{ MPa}$

(a) From Fig. 6-20, for a notch radius of 3 mm and $S_{ut} = 1 \text{ GPa}$, $q \doteq 0.92$.

$$K_f = 1 + q(K_t - 1) = 1 + 0.92(3 - 1) = 2.84$$

$$\sigma_{\max} = -K_f \frac{4P}{\pi d^2} = -\frac{2.84(4)P}{\pi(0.030)^2} = -4018P$$

$$\sigma_m = -\sigma_a = \frac{1}{2}(-4018P) = -2009P$$

$$T = fP \left(\frac{D+d}{4} \right)$$

$$T_{\max} = 0.3P \left(\frac{0.150 + 0.03}{4} \right) = 0.0135P$$

From Fig. 6-21, $q_s \doteq 0.95$. Also, K_{ts} is given as 1.8. Thus,

$$K_{fs} = 1 + q_s(K_{ts} - 1) = 1 + 0.95(1.8 - 1) = 1.76$$

$$\tau_{\max} = \frac{16K_{fs}T}{\pi d^3} = \frac{16(1.76)(0.0135P)}{\pi(0.03)^3} = 4482P$$

$$\tau_a = \tau_m = \frac{1}{2}(4482P) = 2241P$$

Eqs. (6-55) and (6-56):

$$\sigma'_a = \sigma'_m = [(\sigma_a/0.85)^2 + 3\tau_a^2]^{1/2} = [(-2009P/0.85)^2 + 3(2241P)^2]^{1/2} = 4545P$$

$$S'_e = 0.5(1000) = 500 \text{ MPa}$$

$$k_a = 4.51(1000)^{-0.265} = 0.723$$

$$k_b = \left(\frac{30}{7.62} \right)^{-0.107} = 0.864$$

$$S_e = 0.723(0.864)(500) = 312.3 \text{ MPa}$$

Modified Goodman:
$$\frac{\sigma'_a}{S_e} + \frac{\sigma'_m}{S_{ut}} = \frac{1}{n}$$

$$\frac{4545P}{312.3(10^6)} + \frac{4545P}{1000(10^6)} = \frac{1}{3} \Rightarrow P = 17.5(10^3) \text{ N} = 16.1 \text{ kN} \quad \text{Ans.}$$

Yield (conservative):
$$n_y = \frac{S_y}{\sigma'_a + \sigma'_m}$$

$$n_y = \frac{800(10^6)}{2(4545)(17.5)(10^3)} = 5.03 \quad \text{Ans.}$$

(actual):
$$\sigma'_{\max} = (\sigma_{\max}^2 + 3\tau_{\max}^2)^{1/2} = [(-4018P)^2 + 3(4482P)^2]^{1/2}$$

$$= 8741P$$

$$n_y = \frac{S_y}{\sigma'_{\max}} = \frac{800(10^6)}{8741(17.5)10^3} = 5.22$$

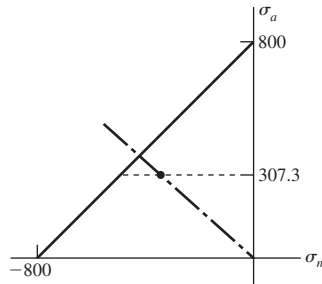
(b) If the shaft is not rotating, $\tau_m = \tau_a = 0$.

$$\sigma_m = \sigma_a = -2009P$$

$$k_b = 1 \quad (\text{axial})$$

$$k_c = 0.85 \quad (\text{Since there is no tension, } k_c = 1 \text{ might be more appropriate.})$$

$$S_e = 0.723(1)(0.85)(500) = 307.3 \text{ MPa}$$



$$n_f = \frac{307.3(10^6)}{2009P} \Rightarrow P = \frac{307.3(10^6)}{3(2009)} = 51.0(10^3) \text{ N} \\ = 51.0 \text{ kN} \quad \text{Ans.}$$

Yield:
$$n_y = \frac{800(10^6)}{2(2009)(51.0)(10^3)} = 3.90 \quad \text{Ans.}$$

6-28 From Prob. 6-27, $K_f = 2.84$, $K_{fs} = 1.76$, $S_e = 312.3 \text{ MPa}$

$$\sigma_{\max} = -K_f \frac{4P_{\max}}{\pi d^2} = -2.84 \left[\frac{(4)(80)(10^{-3})}{\pi(0.030)^2} \right] = -321.4 \text{ MPa}$$

$$\sigma_{\min} = \frac{20}{80}(-321.4) = -80.4 \text{ MPa}$$

$$T_{\max} = f P_{\max} \left(\frac{D+d}{4} \right) = 0.3(80)(10^3) \left(\frac{0.150 + 0.03}{4} \right) = 1080 \text{ N} \cdot \text{m}$$

$$T_{\min} = \frac{20}{80}(1080) = 270 \text{ N} \cdot \text{m}$$

$$\tau_{\max} = K_{fs} \frac{16T_{\max}}{\pi d^3} = 1.76 \left[\frac{16(1080)}{\pi(0.030)^3} (10^{-6}) \right] = 358.5 \text{ MPa}$$

$$\tau_{\min} = \frac{20}{80}(358.5) = 89.6 \text{ MPa}$$

$$\sigma_a = \frac{321.4 - 80.4}{2} = 120.5 \text{ MPa}$$

$$\sigma_m = \frac{-321.4 - 80.4}{2} = -200.9 \text{ MPa}$$

$$\tau_a = \frac{358.5 - 89.6}{2} = 134.5 \text{ MPa}$$

$$\tau_m = \frac{358.5 + 89.6}{2} = 224.1 \text{ MPa}$$

Eqs. (6-55) and (6-56):

$$\sigma'_a = [(\sigma_a/0.85)^2 + 3\tau_a^2]^{1/2} = [(120.5/0.85)^2 + 3(134.5)^2]^{1/2} = 272.7 \text{ MPa}$$

$$\sigma'_m = [(-200.9/0.85)^2 + 3(224.1)^2]^{1/2} = 454.5 \text{ MPa}$$

Goodman:

$$(\sigma_a)_e = \frac{\sigma'_a}{1 - \sigma'_m/S_{ut}} = \frac{272.7}{1 - 454.5/1000} = 499.9 \text{ MPa}$$

Let $f = 0.9$

$$a = \frac{[0.9(1000)]^2}{312.3} = 2594 \text{ MPa}$$

$$b = -\frac{1}{3} \log \left[\frac{0.9(1000)}{312.3} \right] = -0.1532$$

$$N = \left[\frac{(\sigma_a)_e}{a} \right]^{1/b} = \left[\frac{499.9}{2594} \right]^{1/-0.1532} = 46\,520 \text{ cycles} \quad \text{Ans.}$$

6-29

$$S_y = 490 \text{ MPa}, \quad S_{ut} = 590 \text{ MPa}, \quad S_e = 200 \text{ MPa}$$

$$\sigma_m = \frac{420 + 140}{2} = 280 \text{ MPa}, \quad \sigma_a = \frac{420 - 140}{2} = 140 \text{ MPa}$$

Goodman:

$$(\sigma_a)_e = \frac{\sigma_a}{1 - \sigma_m/S_{ut}} = \frac{140}{1 - (280/590)} = 266.5 \text{ MPa} > S_e \quad \therefore \text{finite life}$$

$$a = \frac{[0.9(590)]^2}{200} = 1409.8 \text{ MPa}$$

$$b = -\frac{1}{3} \log \frac{0.9(590)}{200} = -0.141\,355$$

$$N = \left(\frac{266.5}{1409.8} \right)^{-1/0.143\,55} = 131\,200 \text{ cycles}$$

$$N_{\text{remaining}} = 131\,200 - 50\,000 = 81\,200 \text{ cycles}$$

Second loading: $(\sigma_m)_2 = \frac{350 + (-200)}{2} = 75 \text{ MPa}$

$$(\sigma_a)_2 = \frac{350 - (-200)}{2} = 275 \text{ MPa}$$

$$(\sigma_a)_{e2} = \frac{275}{1 - (75/590)} = 315.0 \text{ MPa}$$

(a) Miner's method

$$N_2 = \left(\frac{315}{1409.8} \right)^{-1/0.141355} = 40\,200 \text{ cycles}$$

$$\frac{n_1}{N_1} + \frac{n_2}{N_2} = 1 \Rightarrow \frac{50\,000}{131\,200} + \frac{n_2}{40\,200} = 1$$

$$n_2 = 24\,880 \text{ cycles } \textit{Ans.}$$

(b) Manson's method

Two data points: 0.9(590 MPa), 10^3 cycles
266.5 MPa, 81 200 cycles

$$\frac{0.9(590)}{266.5} = \frac{a_2(10^3)^{b_2}}{a_2(81\,200)^{b_2}}$$

$$1.9925 = (0.012\,315)^{b_2}$$

$$b_2 = \frac{\log 1.9925}{\log 0.012\,315} = -0.156\,789$$

$$a_2 = \frac{266.5}{(81\,200)^{-0.156\,789}} = 1568.4 \text{ MPa}$$

$$n_2 = \left(\frac{315}{1568.4} \right)^{1/-0.156\,789} = 27\,950 \text{ cycles } \textit{Ans.}$$

6-30 (a) Miner's method

$$a = \frac{[0.9(76)]^2}{30} = 155.95 \text{ kpsi}$$

$$b = -\frac{1}{3} \log \frac{0.9(76)}{30} = -0.119\,31$$

$$\sigma_1 = 48 \text{ kpsi}, \quad N_1 = \left(\frac{48}{155.95} \right)^{1/-0.119\,31} = 19\,460 \text{ cycles}$$

$$\sigma_2 = 38 \text{ kpsi}, \quad N_2 = \left(\frac{38}{155.95} \right)^{1/-0.119\,31} = 137\,880 \text{ cycles}$$

$$\sigma_3 = 32 \text{ kpsi}, \quad N_3 = \left(\frac{32}{155.95} \right)^{1/-0.119\,31} = 582\,150 \text{ cycles}$$

$$\frac{n_1}{N_1} + \frac{n_2}{N_2} + \frac{n_3}{N_3} = 1$$

$$\frac{4000}{19\,460} + \frac{60\,000}{137\,880} + \frac{n_3}{582\,150} = 1 \Rightarrow n_3 = 209\,160 \text{ cycles } \textit{Ans.}$$

(b) Manson's method

The life remaining after the first cycle is $N_{R_1} = 19\,460 - 4000 = 15\,460$ cycles. The two data points required to define $S'_{e,1}$ are $[0.9(76), 10^3]$ and $(48, 15\,460)$.

$$\frac{0.9(76)}{48} = \frac{a_2(10^3)^{b_2}}{a_2(15\,460)^{b_2}} \Rightarrow 1.425 = (0.064\,683)^{b_2}$$

$$b_2 = \frac{\log(1.425)}{\log(0.064683)} = -0.129342$$

$$a_2 = \frac{48}{(15460)^{-0.129342}} = 167.14 \text{ kpsi}$$

$$N_2 = \left(\frac{38}{167.14} \right)^{-1/0.129342} = 94110 \text{ cycles}$$

$$N_{R_2} = 94110 - 60000 = 34110 \text{ cycles}$$

$$\frac{0.9(76)}{38} = \frac{a_3(10^3)^{b_3}}{a_3(34110)^{b_3}} \Rightarrow 1.8 = (0.029317)^{b_3}$$

$$b_3 = \frac{\log 1.8}{\log(0.029317)} = -0.166531, \quad a_3 = \frac{38}{(34110)^{-0.166531}} = 216.10 \text{ kpsi}$$

$$N_3 = \left(\frac{32}{216.1} \right)^{-1/0.166531} = 95740 \text{ cycles } \textit{Ans.}$$

6-31 Using Miner's method

$$a = \frac{[0.9(100)]^2}{50} = 162 \text{ kpsi}$$

$$b = -\frac{1}{3} \log \frac{0.9(100)}{50} = -0.085091$$

$$\sigma_1 = 70 \text{ kpsi}, \quad N_1 = \left(\frac{70}{162} \right)^{1/-0.085091} = 19170 \text{ cycles}$$

$$\sigma_2 = 55 \text{ kpsi}, \quad N_2 = \left(\frac{55}{162} \right)^{1/-0.085091} = 326250 \text{ cycles}$$

$$\sigma_3 = 40 \text{ kpsi}, \quad N_3 \rightarrow \infty$$

$$\frac{0.2N}{19170} + \frac{0.5N}{326250} + \frac{0.3N}{\infty} = 1$$

$$N = 83570 \text{ cycles } \textit{Ans.}$$

6-32 Given $S_{ut} = 245\text{LN}(1, 0.0508)$ kpsi

From Table 7-13: $a = 1.34, b = -0.086, C = 0.12$

$$\begin{aligned} \mathbf{k}_a &= 1.34\bar{S}_{ut}^{-0.086}\text{LN}(1, 0.120) \\ &= 1.34(245)^{-0.086}\text{LN}(1, 0.12) \\ &= 0.835\text{LN}(1, 0.12) \end{aligned}$$

$$k_b = 1.02 \quad (\text{as in Prob. 6-1})$$

Eq. (6-70) $\mathbf{S}_e = 0.835(1.02)\text{LN}(1, 0.12)[107\text{LN}(1, 0.139)]$

$$\bar{S}_e = 0.835(1.02)(107) = 91.1 \text{ kpsi}$$

Now

$$C_{Se} \doteq (0.12^2 + 0.139^2)^{1/2} = 0.184$$

$$S_e = 91.1\text{LN}(1, 0.184) \text{ kpsi} \quad \text{Ans.}$$

6-33 A Priori Decisions:

- Material and condition: 1018 CD, $S_{ut} = 440\text{LN}(1, 0.03)$, and $S_y = 370\text{LN}(1, 0.061)$ MPa
- Reliability goal: $R = 0.999$ ($z = -3.09$)
- Function:

Critical location—hole

- Variabilities:

$$C_{ka} = 0.058$$

$$C_{kc} = 0.125$$

$$C_{\phi} = 0.138$$

$$C_{Se} = (C_{ka}^2 + C_{kc}^2 + C_{\phi}^2)^{1/2} = (0.058^2 + 0.125^2 + 0.138^2)^{1/2} = 0.195$$

$$C_{kc} = 0.10$$

$$C_{Fa} = 0.20$$

$$C_{\sigma a} = (0.10^2 + 0.20^2)^{1/2} = 0.234$$

$$C_n = \sqrt{\frac{C_{Se}^2 + C_{\sigma a}^2}{1 + C_{\sigma a}^2}} = \sqrt{\frac{0.195^2 + 0.234^2}{1 + 0.234^2}} = 0.297$$

Resulting in a design factor n_f of,

$$\text{Eq. (6-88): } n_f = \exp[-(-3.09)\sqrt{\ln(1 + 0.297^2)} + \ln\sqrt{1 + 0.297^2}] = 2.56$$

- Decision: Set $n_f = 2.56$

Now proceed deterministically using the mean values:

$$\text{Table 6-10: } \bar{k}_a = 4.45(440)^{-0.265} = 0.887$$

$$k_b = 1$$

$$\text{Table 6-11: } \bar{k}_c = 1.43(440)^{-0.0778} = 0.891$$

$$\text{Eq. (6-70): } \bar{S}'_e = 0.506(440) = 222.6 \text{ MPa}$$

$$\text{Eq. (6-71): } \bar{S}_e = 0.887(1)0.891(222.6) = 175.9 \text{ MPa}$$

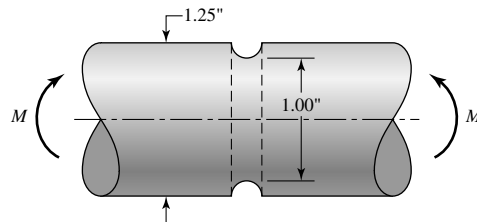
From Prob. 6-10, $K_f = 2.23$. Thus,

$$\bar{\sigma}_a = \bar{K}_f \frac{\bar{F}_a}{A} = \bar{K}_f \frac{\bar{F}_a}{t(60 - 12)} = \frac{\bar{S}_e}{\bar{n}_f}$$

$$\text{and, } t = \frac{\bar{n}_f \bar{K}_f \bar{F}_a}{48 \bar{S}_e} = \frac{2.56(2.23)15(10^3)}{48(175.9)} = 10.14 \text{ mm}$$

Decision: Depending on availability, (1) select $t = 10$ mm, recalculate n_f and R , and determine whether the reduced reliability is acceptable, or, (2) select $t = 11$ mm or larger, and determine whether the increase in cost and weight is acceptable. *Ans.*

6-34



Rotation is presumed. M and S_{ut} are given as deterministic, but notice that σ is not; therefore, a reliability estimation can be made.

From Eq. (6-70):

$$\begin{aligned} S'_e &= 0.506(110)\text{LN}(1, 0.138) \\ &= 55.7\text{LN}(1, 0.138) \text{ kpsi} \end{aligned}$$

Table 6-10:

$$\begin{aligned} k_a &= 2.67(110)^{-0.265}\text{LN}(1, 0.058) \\ &= 0.768\text{LN}(1, 0.058) \end{aligned}$$

Based on $d = 1$ in, Eq. (6-20) gives

$$k_b = \left(\frac{1}{0.30}\right)^{-0.107} = 0.879$$

Conservatism is not necessary

$$\begin{aligned} S_e &= 0.768[\text{LN}(1, 0.058)](0.879)(55.7)[\text{LN}(1, 0.138)] \\ \bar{S}_e &= 37.6 \text{ kpsi} \\ C_{Se} &= (0.058^2 + 0.138^2)^{1/2} = 0.150 \\ S_e &= 37.6\text{LN}(1, 0.150) \end{aligned}$$

Fig. A-15-14: $D/d = 1.25$, $r/d = 0.125$. Thus $K_t = 1.70$ and Eqs. (6-78), (6-79) and Table 6-15 give

$$\begin{aligned} \mathbf{K}_f &= \frac{1.70\text{LN}(1, 0.15)}{1 + (2/\sqrt{0.125})[(1.70 - 1)/(1.70)](3/110)} \\ &= 1.598\text{LN}(1, 0.15) \\ \sigma &= \mathbf{K}_f \frac{32M}{\pi d^3} = 1.598[\text{LN}(1 - 0.15)] \left[\frac{32(1400)}{\pi(1)^3} \right] \\ &= 22.8\text{LN}(1, 0.15) \text{ kpsi} \end{aligned}$$

From Eq. (5-43), p. 242:

$$z = -\frac{\ln \left[(37.6/22.8)\sqrt{(1 + 0.15^2)/(1 + 0.15^2)} \right]}{\sqrt{\ln[(1 + 0.15^2)(1 + 0.15^2)]}} = -2.37$$

From Table A-10, $p_f = 0.00889$

$$\therefore R = 1 - 0.00889 = 0.991 \quad \text{Ans.}$$

Note: The correlation method uses only the mean of S_{ut} ; its variability is already included in the 0.138. When a deterministic load, in this case M , is used in a reliability estimate, engineers state, "For a *Design Load* of M , the reliability is 0.991." They are in fact referring to a Deterministic Design Load.

6-35 For completely reversed torsion, k_a and k_b of Prob. 6-34 apply, but k_c must also be considered.

$$\begin{aligned} \text{Eq. 6-74:} \quad k_c &= 0.328(110)^{0.125} \text{LN}(1, 0.125) \\ &= 0.590 \text{LN}(1, 0.125) \end{aligned}$$

Note 0.590 is close to 0.577.

$$\begin{aligned} S_{Se} &= k_a k_b k_c S'_e \\ &= 0.768[\text{LN}(1, 0.058)](0.878)[0.590 \text{LN}(1, 0.125)][55.7 \text{LN}(1, 0.138)] \\ \bar{S}_{Se} &= 0.768(0.878)(0.590)(55.7) = 22.2 \text{ kpsi} \\ C_{Se} &= (0.058^2 + 0.125^2 + 0.138^2)^{1/2} = 0.195 \\ S_{Se} &= 22.2 \text{LN}(1, 0.195) \text{ kpsi} \end{aligned}$$

Fig. A-15-15: $D/d = 1.25$, $r/d = 0.125$, then $K_{ts} = 1.40$. From Eqs. (6-78), (6-79) and Table 6-15

$$\begin{aligned} K_{ts} &= \frac{1.40 \text{LN}(1, 0.15)}{1 + (2/\sqrt{0.125}) [(1.4 - 1)/1.4](3/110)} = 1.34 \text{LN}(1, 0.15) \\ \tau &= K_{ts} \frac{16T}{\pi d^3} \\ \tau &= 1.34[\text{LN}(1, 0.15)] \left[\frac{16(1.4)}{\pi(1)^3} \right] \\ &= 9.55 \text{LN}(1, 0.15) \text{ kpsi} \end{aligned}$$

From Eq. (5-43), p. 242:

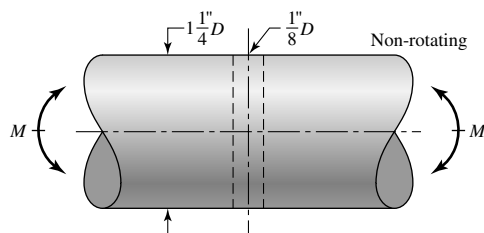
$$z = -\frac{\ln \left[(22.2/9.55) \sqrt{(1 + 0.15^2)/(1 + 0.195^2)} \right]}{\sqrt{\ln [(1 + 0.195^2)(1 + 0.15^2)]}} = -3.43$$

From Table A-10, $p_f = 0.0003$

$$R = 1 - p_f = 1 - 0.0003 = 0.9997 \quad \text{Ans.}$$

For a design with completely-reversed torsion of 1400 lbf · in, the reliability is 0.9997. The improvement comes from a smaller stress-concentration factor in torsion. See the note at the end of the solution of Prob. 6-34 for the reason for the phraseology.

6-36



$$S_{ut} = 58 \text{ kpsi}$$

$$S'_e = 0.506(58)\text{LN}(1, 0.138)$$

$$= 29.3\text{LN}(1, 0.138) \text{ kpsi}$$

Table 6-10:

$$k_a = 14.5(58)^{-0.719}\text{LN}(1, 0.11)$$

$$= 0.782\text{LN}(1, 0.11)$$

Eq. (6-24):

$$d_e = 0.37(1.25) = 0.463 \text{ in}$$

$$k_b = \left(\frac{0.463}{0.30}\right)^{-0.107} = 0.955$$

$$S_e = 0.782[\text{LN}(1, 0.11)](0.955)[29.3\text{LN}(1, 0.138)]$$

$$\bar{S}_e = 0.782(0.955)(29.3) = 21.9 \text{ kpsi}$$

$$C_{S_e} = (0.11^2 + 0.138^2)^{1/2} = 0.150$$

Table A-16: $d/D = 0$, $a/D = 0.1$, $A = 0.83 \therefore K_t = 2.27$.

From Eqs. (6-78) and (6-79) and Table 6-15

$$\mathbf{K}_f = \frac{2.27\text{LN}(1, 0.10)}{1 + (2/\sqrt{0.125}) [(2.27 - 1)/2.27](5/58)} = 1.783\text{LN}(1, 0.10)$$

Table A-16:

$$Z = \frac{\pi AD^3}{32} = \frac{\pi(0.83)(1.25^3)}{32} = 0.159 \text{ in}^3$$

$$\sigma = \mathbf{K}_f \frac{M}{Z} = 1.783\text{LN}(1, 0.10) \left(\frac{1.6}{0.159}\right)$$

$$= 17.95\text{LN}(1, 0.10) \text{ kpsi}$$

$$\bar{\sigma} = 17.95 \text{ kpsi}$$

$$C_\sigma = 0.10$$

Eq. (5-43), p. 242:

$$z = -\frac{\ln\left[(21.9/17.95)\sqrt{(1+0.10^2)/(1+0.15^2)}\right]}{\sqrt{\ln[(1+0.15^2)(1+0.10^2)]}} = -1.07$$

Table A-10:

$$p_f = 0.1423$$

$$R = 1 - p_f = 1 - 0.1423 = 0.858 \text{ Ans.}$$

For a completely-reversed design load M_a of 1400 lbf · in, the reliability estimate is 0.858.

6-37 For a non-rotating bar subjected to completely reversed torsion of $T_a = 2400 \text{ lbf} \cdot \text{in}$

From Prob. 6-36:

$$S'_e = 29.3 \text{LN}(1, 0.138) \text{ kpsi}$$

$$\mathbf{k}_a = 0.782 \text{LN}(1, 0.11)$$

$$k_b = 0.955$$

For \mathbf{k}_c use Eq. (6-74):

$$\mathbf{k}_c = 0.328(58)^{0.125} \text{LN}(1, 0.125)$$

$$= 0.545 \text{LN}(1, 0.125)$$

$$\mathbf{S}_{Se} = 0.782[\text{LN}(1, 0.11)](0.955)[0.545 \text{LN}(1, 0.125)][29.3 \text{LN}(1, 0.138)]$$

$$\bar{S}_{Se} = 0.782(0.955)(0.545)(29.3) = 11.9 \text{ kpsi}$$

$$C_{Se} = (0.11^2 + 0.125^2 + 0.138^2)^{1/2} = 0.216$$

Table A-16: $d/D = 0$, $a/D = 0.1$, $A = 0.92$, $K_{ts} = 1.68$

From Eqs. (6-78), (6-79), Table 6-15

$$\mathbf{K}_{fs} = \frac{1.68 \text{LN}(1, 0.10)}{1 + (2/\sqrt{0.125})[(1.68 - 1)/1.68](5/58)}$$

$$= 1.403 \text{LN}(1, 0.10)$$

Table A-16:

$$J_{\text{net}} = \frac{\pi AD^4}{32} = \frac{\pi(0.92)(1.25^4)}{32} = 0.2201$$

$$\tau_a = \mathbf{K}_{fs} \frac{T_a c}{J_{\text{net}}}$$

$$= 1.403[\text{LN}(1, 0.10)] \left[\frac{2.4(1.25/2)}{0.2201} \right]$$

$$= 9.56 \text{LN}(1, 0.10) \text{ kpsi}$$

From Eq. (5-43), p. 242:

$$z = -\frac{\ln \left[(11.9/9.56) \sqrt{(1 + 0.10^2)/(1 + 0.216^2)} \right]}{\sqrt{\ln[(1 + 0.10^2)(1 + 0.216^2)]}} = -0.85$$

Table A-10, $p_f = 0.1977$

$$R = 1 - p_f = 1 - 0.1977 = 0.80 \quad \text{Ans.}$$

6-38 This is a very important task for the student to attempt before starting Part 3. It illustrates the drawback of the deterministic factor of safety method. It also identifies the a priori decisions and their consequences.

The range of force fluctuation in Prob. 6-23 is -16 to $+4$ kip, or 20 kip. Repeatedly-applied F_a is 10 kip. The stochastic properties of this heat of AISI 1018 CD are given.

Function	Consequences
Axial	$F_a = 10$ kip
Fatigue load	$C_{Fa} = 0$
	$C_{kc} = 0.125$
Overall reliability $R \geq 0.998$; with twin fillets	$z = -3.09$
$R \geq \sqrt{0.998} \geq 0.999$	$C_{Kf} = 0.11$
Cold rolled or machined surfaces	$C_{ka} = 0.058$
Ambient temperature	$C_{kd} = 0$
Use correlation method	$C_\phi = 0.138$
Stress amplitude	$C_{Kf} = 0.11$
	$C_{\sigma a} = 0.11$
Significant strength S_e	$C_{Se} = (0.058^2 + 0.125^2 + 0.138^2)^{1/2}$ $= 0.195$

Choose the mean design factor which will meet the reliability goal

$$C_n = \sqrt{\frac{0.195^2 + 0.11^2}{1 + 0.11^2}} = 0.223$$

$$\bar{n} = \exp[-(-3.09)\sqrt{\ln(1 + 0.223^2)} + \ln\sqrt{1 + 0.223^2}]$$

$$\bar{n} = 2.02$$

Review the number and quantitative consequences of the designer's a priori decisions to accomplish this. The operative equation is the definition of the design factor

$$\sigma_a = \frac{S_e}{\mathbf{n}}$$

$$\bar{\sigma}_a = \frac{\bar{S}_e}{\bar{n}} \Rightarrow \frac{\bar{K}_f F_a}{w_2 h} = \frac{\bar{S}_e}{\bar{n}}$$

Solve for thickness h . To do so we need

$$\bar{k}_a = 2.67\bar{S}_{ut}^{-0.265} = 2.67(64)^{-0.265} = 0.887$$

$$k_b = 1$$

$$\bar{k}_c = 1.23\bar{S}_{ut}^{-0.078} = 1.23(64)^{-0.078} = 0.889$$

$$\bar{k}_d = \bar{k}_e = 1$$

$$\bar{S}_e = 0.887(1)(0.889)(1)(1)(0.506)(64) = 25.5 \text{ kpsi}$$

Fig. A-15-5: $D = 3.75$ in, $d = 2.5$ in, $D/d = 3.75/2.5 = 1.5$, $r/d = 0.25/2.5 = 0.10$

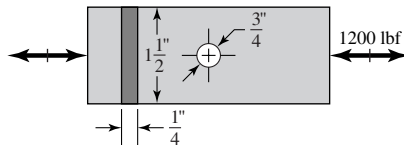
$$\therefore K_t = 2.1$$

$$\bar{K}_f = \frac{2.1}{1 + (2/\sqrt{0.25})[(2.1 - 1)/(2.1)](4/64)} = 1.857$$

$$h = \frac{\bar{K}_f \bar{n} F_a}{w_2 \bar{S}_e} = \frac{1.857(2.02)(10)}{2.5(25.5)} = 0.667 \quad \text{Ans.}$$

This thickness separates \bar{S}_e and $\bar{\sigma}_a$ so as to realize the reliability goal of 0.999 at each shoulder. The design decision is to make t the next available thickness of 1018 CD steel strap from the same heat. This eliminates machining to the desired thickness and the extra cost of thicker work stock will be less than machining the fares. Ask your steel supplier what is available *in this heat*.

6-39



$$F_a = 1200 \text{ lbf}$$

$$S_{ut} = 80 \text{ kpsi}$$

(a) Strength

$$\begin{aligned} k_a &= 2.67(80)^{-0.265} \text{LN}(1, 0.058) \\ &= 0.836 \text{LN}(1, 0.058) \end{aligned}$$

$$k_b = 1$$

$$\begin{aligned} k_c &= 1.23(80)^{-0.078} \text{LN}(1, 0.125) \\ &= 0.874 \text{LN}(1, 0.125) \end{aligned}$$

$$\begin{aligned} S'_a &= 0.506(80) \text{LN}(1, 0.138) \\ &= 40.5 \text{LN}(1, 0.138) \text{ kpsi} \end{aligned}$$

$$S_e = 0.836[\text{LN}(1, 0.058)](1)[0.874 \text{LN}(1, 0.125)][40.5 \text{LN}(1, 0.138)]$$

$$\bar{S}_e = 0.836(1)(0.874)(40.5) = 29.6 \text{ kpsi}$$

$$C_{S_e} = (0.058^2 + 0.125^2 + 0.138^2)^{1/2} = 0.195$$

Stress: Fig. A-15-1; $d/w = 0.75/1.5 = 0.5$, $K_t = 2.17$. From Eqs. (6-78), (6-79) and Table 6-15

$$\begin{aligned} \mathbf{K}_f &= \frac{2.17 \text{LN}(1, 0.10)}{1 + (2/\sqrt{0.375})[(2.17 - 1)/2.17](5/80)} \\ &= 1.95 \text{LN}(1, 0.10) \end{aligned}$$

$$\sigma_a = \frac{\mathbf{K}_f F_a}{(w - d)t}, \quad C_\sigma = 0.10$$

$$\bar{\sigma}_a = \frac{\bar{K}_f F_a}{(w - d)t} = \frac{1.95(1.2)}{(1.5 - 0.75)(0.25)} = 12.48 \text{ kpsi}$$

$$\bar{S}_a = \bar{S}_e = 29.6 \text{ kpsi}$$

$$z = -\frac{\ln(\bar{S}_a/\bar{\sigma}_a)\sqrt{(1+C_\sigma^2)/(1+C_S^2)}}{\sqrt{\ln(1+C_\sigma^2)(1+C_S^2)}}$$

$$= -\frac{\ln\left[(29.6/12.48)\sqrt{(1+0.10^2)/(1+0.195^2)}\right]}{\sqrt{\ln(1+0.10^2)(1+0.195^2)}} = -3.9$$

From Table A-20

$$p_f = 4.481(10^{-5})$$

$$R = 1 - 4.481(10^{-5}) = 0.999955 \quad \text{Ans.}$$

(b) All computer programs will differ in detail.

6-40 Each computer program will differ in detail. When the programs are working, the experience should reinforce that the decision regarding \bar{n}_f is independent of mean values of strength, stress or associated geometry. The reliability goal can be realized by noting the impact of all those a priori decisions.

6-41 Such subprograms allow a simple call when the information is needed. The calling program is often named an executive routine (executives tend to delegate chores to others and only want the answers).

6-42 This task is similar to Prob. 6-41.

6-43 Again, a similar task.

6-44 The results of Probs. 6-41 to 6-44 will be the basis of a class computer aid for fatigue problems. The codes should be made available to the class through the library of the computer network or main frame available to your students.

6-45 Peterson's notch sensitivity q has very little statistical basis. This subroutine can be used to show the variation in q , which is not apparent to those who embrace a deterministic q .

6-46 An additional program which is useful.

Chapter 7

7-1 (a) DE-Gerber, Eq. (7-10):

$$\begin{aligned}
 A &= \{4[2.2(600)]^2 + 3[1.8(400)]^2\}^{1/2} = 2920 \text{ lbf} \cdot \text{in} \\
 B &= \{4[2.2(500)]^2 + 3[1.8(300)]^2\}^{1/2} = 2391 \text{ lbf} \cdot \text{in} \\
 d &= \left\{ \frac{8(2)(2920)}{\pi(30\,000)} \left[1 + \left(1 + \left[\frac{2(2391)(30\,000)}{2920(100\,000)} \right]^2 \right)^{1/2} \right] \right\}^{1/3} \\
 &= 1.016 \text{ in} \quad \text{Ans.}
 \end{aligned}$$

(b) DE-elliptic, Eq. (7-12) can be shown to be

$$\begin{aligned}
 d &= \left(\frac{16n}{\pi} \sqrt{\frac{A^2}{S_e^2} + \frac{B^2}{S_y^2}} \right)^{1/3} \\
 &= \left[\frac{16(2)}{\pi} \sqrt{\left(\frac{2920}{30\,000} \right)^2 + \left(\frac{2391}{80\,000} \right)^2} \right]^{1/3} = 1.012 \text{ in} \quad \text{Ans.}
 \end{aligned}$$

(c) DE-Soderberg, Eq. (7-14) can be shown to be

$$\begin{aligned}
 d &= \left[\frac{16n}{\pi} \left(\frac{A}{S_e} + \frac{B}{S_y} \right) \right]^{1/3} \\
 &= \left[\frac{16(2)}{\pi} \left(\frac{2920}{30\,000} + \frac{2391}{80\,000} \right) \right]^{1/3} \\
 &= 1.090 \text{ in} \quad \text{Ans.}
 \end{aligned}$$

(d) DE-Goodman: Eq. (7-8) can be shown to be

$$\begin{aligned}
 d &= \left[\frac{16n}{\pi} \left(\frac{A}{S_e} + \frac{B}{S_{ut}} \right) \right]^{1/3} \\
 &= \left[\frac{16(2)}{\pi} \left(\frac{2920}{30\,000} + \frac{2391}{100\,000} \right) \right]^{1/3} = 1.073 \text{ in} \quad \text{Ans.}
 \end{aligned}$$

Criterion	d (in)	Compared to DE-Gerber	
DE-Gerber	1.016		
DE-elliptic	1.012	0.4% lower	less conservative
DE-Soderberg	1.090	7.3% higher	more conservative
DE-Goodman	1.073	5.6% higher	more conservative

7-2 This problem has to be done by successive trials, since S_e is a function of shaft size. The material is SAE 2340 for which $S_{ut} = 1226$ MPa, $S_y = 1130$ MPa, and $H_B \geq 368$.

$$\text{Eq. (6-19):} \quad k_a = 4.51(1226)^{-0.265} = 0.685$$

Trial #1: Choose $d_r = 22$ mm

$$\text{Eq. (6-20):} \quad k_b = \left(\frac{22}{7.62}\right)^{-0.107} = 0.893$$

$$\text{Eq. (6-18):} \quad S_e = 0.685(0.893)(0.5)(1226) = 375 \text{ MPa}$$

$$d_r = d - 2r = 0.75D - 2D/20 = 0.65D$$

$$D = \frac{d_r}{0.65} = \frac{22}{0.65} = 33.8 \text{ mm}$$

$$r = \frac{D}{20} = \frac{33.8}{20} = 1.69 \text{ mm}$$

Fig. A-15-14:

$$d = d_r + 2r = 22 + 2(1.69) = 25.4 \text{ mm}$$

$$\frac{d}{d_r} = \frac{25.4}{22} = 1.15$$

$$\frac{r}{d_r} = \frac{1.69}{22} = 0.077$$

$$K_t = 1.9$$

$$\text{Fig. A-15-15:} \quad K_{ts} = 1.5$$

$$\text{Fig. 6-20:} \quad r = 1.69 \text{ mm}, \quad q = 0.90$$

$$\text{Fig. 6-21:} \quad r = 1.69 \text{ mm}, \quad q_s = 0.97$$

$$\text{Eq. (6-32):} \quad K_f = 1 + 0.90(1.9 - 1) = 1.81$$

$$K_{fs} = 1 + 0.97(1.5 - 1) = 1.49$$

We select the DE-ASME Elliptic failure criteria.

Eq. (7-12) with d as d_r , and $M_m = T_a = 0$,

$$d_r = \left\{ \frac{16(2.5)}{\pi} \left[4 \left(\frac{1.81(70)(10^3)}{375} \right)^2 + 3 \left(\frac{1.49(45)(10^3)}{1130} \right)^2 \right]^{1/2} \right\}^{1/3}$$

$$= 20.6 \text{ mm}$$

Trial #2: Choose $d_r = 20.6$ mm

$$k_b = \left(\frac{20.6}{7.62} \right)^{-0.107} = 0.899$$

$$S_e = 0.685(0.899)(0.5)(1226) = 377.5 \text{ MPa}$$

$$D = \frac{d_r}{0.65} = \frac{20.6}{0.65} = 31.7 \text{ mm}$$

$$r = \frac{D}{20} = \frac{31.7}{20} = 1.59 \text{ mm}$$

Figs. A-15-14 and A-15-15:

$$d = d_r + 2r = 20.6 + 2(1.59) = 23.8 \text{ mm}$$

$$\frac{d}{d_r} = \frac{23.8}{20.6} = 1.16$$

$$\frac{r}{d_r} = \frac{1.59}{20.6} = 0.077$$

We are at the limit of readability of the figures so

$$K_t = 1.9, \quad K_{ts} = 1.5 \quad q = 0.9, \quad q_s = 0.97$$

$$\therefore K_f = 1.81 \quad K_{fs} = 1.49$$

Using Eq. (7-12) produces $d_r = 20.5$ mm. Further iteration produces no change.

Decisions:

$$d_r = 20.5 \text{ mm}$$

$$D = \frac{20.5}{0.65} = 31.5 \text{ mm}, \quad d = 0.75(31.5) = 23.6 \text{ mm}$$

Use $D = 32$ mm, $d = 24$ mm, $r = 1.6$ mm *Ans.*

7-3 $F \cos 20^\circ(d/2) = T$, $F = 2T/(d \cos 20^\circ) = 2(3000)/(6 \cos 20^\circ) = 1064 \text{ lbf}$

$$M_C = 1064(4) = 4257 \text{ lbf} \cdot \text{in}$$

For sharp fillet radii at the shoulders, from Table 7-1, $K_t = 2.7$, and $K_{ts} = 2.2$. Examining Figs. 6-20 and 6-21, with $S_{ut} = 80$ kpsi, conservatively estimate $q = 0.8$ and $q_s = 0.9$. These estimates can be checked once a specific fillet radius is determined.

Eq. (6-32): $K_f = 1 + (0.8)(2.7 - 1) = 2.4$

$$K_{fs} = 1 + (0.9)(2.2 - 1) = 2.1$$

(a) Static analysis using fatigue stress concentration factors:

From Eq. (7-15) with $M = M_m$, $T = T_m$, and $M_a = T_a = 0$,

$$\sigma'_{\max} = \left[\left(\frac{32K_f M}{\pi d^3} \right)^2 + 3 \left(\frac{16K_{fs} T}{\pi d^3} \right)^2 \right]^{1/2}$$

$$\text{Eq. (7-16):} \quad n = \frac{S_y}{\sigma'_{\max}} = \frac{S_y}{\left[\left(\frac{32K_f M}{\pi d^3} \right)^2 + 3 \left(\frac{16K_{fs} T}{\pi d^3} \right)^2 \right]^{1/2}}$$

Solving for d ,

$$\begin{aligned} d &= \left\{ \frac{16n}{\pi S_y} [4(K_f M)^2 + 3(K_{fs} T)^2]^{1/2} \right\}^{1/3} \\ &= \left\{ \frac{16(2.5)}{\pi(60\,000)} [4(2.4)(4257)^2 + 3(2.1)(3000)^2]^{1/2} \right\}^{1/3} \\ &= 1.700 \text{ in } \textit{Ans.} \end{aligned}$$

$$\text{(b)} \quad k_a = 2.70(80)^{-0.265} = 0.845$$

Assume $d = 2.00$ in to estimate the size factor,

$$k_b = \left(\frac{2}{0.3} \right)^{-0.107} = 0.816$$

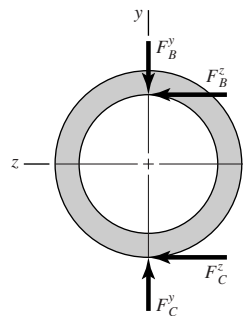
$$S_e = 0.845(0.816)(0.5)(80) = 27.6 \text{ kpsi}$$

Selecting the DE-ASME Elliptic criteria, use Eq. (7-12) with $M_m = T_a = 0$.

$$d = \left\{ \frac{16(2.5)}{\pi} \left[4 \left(\frac{2.4(4257)}{27\,600} \right)^2 + 3 \left(\frac{2.1(3000)}{60\,000} \right)^2 \right]^{1/2} \right\}^{1/3} = 2.133 \text{ in}$$

Revising k_b results in $d = 2.138$ in *Ans.*

7-4 We have a design task of identifying bending moment and torsion diagrams which are preliminary to an industrial roller shaft design.



$$F_C^y = 30(8) = 240 \text{ lbf}$$

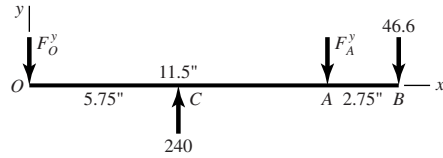
$$F_C^z = 0.4(240) = 96 \text{ lbf}$$

$$T = F_C^z(2) = 96(2) = 192 \text{ lbf} \cdot \text{in}$$

$$F_B^z = \frac{T}{1.5} = \frac{192}{1.5} = 128 \text{ lbf}$$

$$F_B^y = F_B^z \tan 20^\circ = 128 \tan 20^\circ = 46.6 \text{ lbf}$$

(a) *xy-plane*



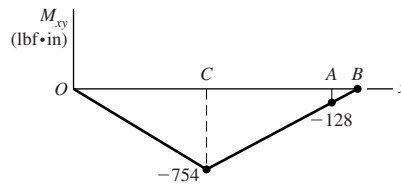
$$\sum M_O = 240(5.75) - F_A^y(11.5) - 46.6(14.25) = 0$$

$$F_A^y = \frac{240(5.75) - 46.6(14.25)}{11.5} = 62.3 \text{ lbf}$$

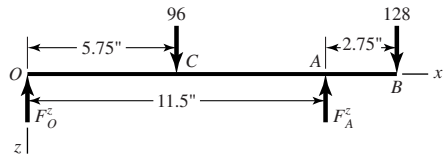
$$\sum M_A = F_O^y(11.5) - 46.6(2.75) - 240(5.75) = 0$$

$$F_O^y = \frac{240(5.75) + 46.6(2.75)}{11.5} = 131.1 \text{ lbf}$$

Bending moment diagram



xz-plane



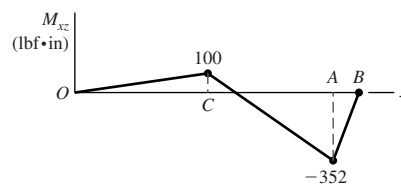
$$\begin{aligned} \sum M_O &= 0 \\ &= 96(5.75) - F_A^z(11.5) + 128(14.25) \end{aligned}$$

$$F_A^z = \frac{96(5.75) + 128(14.25)}{11.5} = 206.6 \text{ lbf}$$

$$\begin{aligned} \sum M_A &= 0 \\ &= F_O^z(11.5) + 128(2.75) - 96(5.75) \end{aligned}$$

$$F_O^z = \frac{96(5.75) - 128(2.75)}{11.5} = 17.4 \text{ lbf}$$

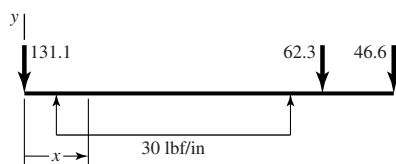
Bending moment diagram:



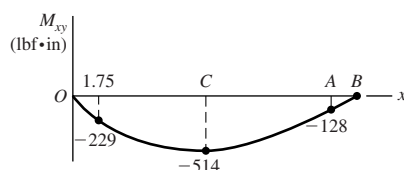
$$M_C = \sqrt{100^2 + (-754)^2} = 761 \text{ lbf} \cdot \text{in}$$

$$M_A = \sqrt{(-128)^2 + (-352)^2} = 375 \text{ lbf} \cdot \text{in}$$

This approach over-estimates the bending moment at C, but not at A.

(b) *xy-plane*

$$M_{xy} = -131.1x + 15(x - 1.75)^2 - 15(x - 9.75)^2 - 62.3(x - 11.5)^1$$

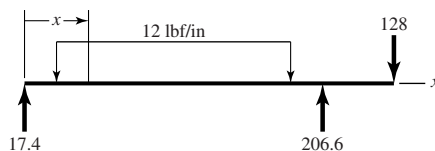


M_{\max} occurs at 6.12 in

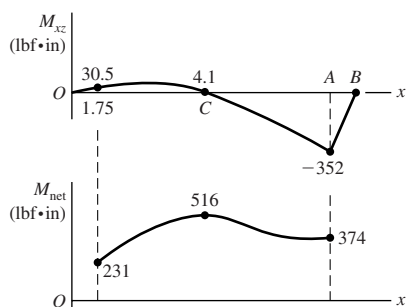
$$M_{\max} = -516 \text{ lbf} \cdot \text{in}$$

$$M_C = 131.1(5.75) - 15(5.75 - 1.75)^2 = 514$$

Reduced from 754 lbf·in. The maximum occurs at $x = 6.12$ in rather than C , but it is close enough.

xz-plane

$$M_{xz} = 17.4x - 6(x - 1.75)^2 + 6(x - 9.75)^2 + 206.6(x - 11.5)^1$$



$$\text{Let } M_{\text{net}} = \sqrt{M_{xy}^2 + M_{xz}^2}$$

Plot $M_{\text{net}}(x)$

$$1.75 \leq x \leq 11.5 \text{ in}$$

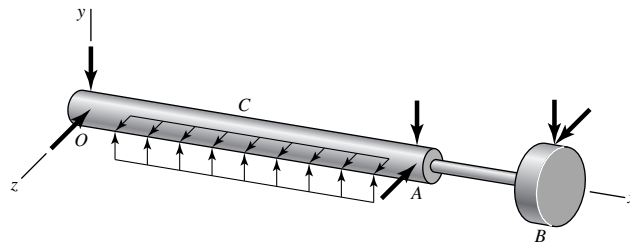
$$M_{\max} = 516 \text{ lbf} \cdot \text{in}$$

$$\text{at } x = 6.25 \text{ in}$$

Torque: In both cases the torque rises from 0 to 192 lbf·in linearly across the roller and is steady until the coupling keyway is encountered; then it falls linearly to 0 across the key. *Ans.*

7-5 This is a design problem, which can have many acceptable designs. See the solution for Problem 7-7 for an example of the design process.

7-6 If students have access to finite element or beam analysis software, have them model the shaft to check deflections. If not, solve a simpler version of shaft. The 1" diameter sections will not affect the results much, so model the 1" diameter as 1.25". Also, ignore the step in AB.



From Prob. 18-10, integrate M_{xy} and M_{xz}

xy plane, with $dy/dx = y'$

$$EIy' = -\frac{131.1}{2}(x^2) + 5(x - 1.75)^3 - 5(x - 9.75)^3 - \frac{62.3}{2}(x - 11.5)^2 + C_1 \quad (1)$$

$$EIy = -\frac{131.1}{6}(x^3) + \frac{5}{4}(x - 1.75)^4 - \frac{5}{4}(x - 9.75)^4 - \frac{62.3}{6}(x - 11.5)^3 + C_1x + C_2$$

$$y = 0 \text{ at } x = 0 \quad \Rightarrow \quad C_2 = 0$$

$$y = 0 \text{ at } x = 11.5 \quad \Rightarrow \quad C_1 = 1908.4 \text{ lbf} \cdot \text{in}^3$$

From (1) $x = 0: \quad EIy' = 1908.4$

$$x = 11.5: \quad EIy' = -2153.1$$

xz plane (treating $z \uparrow +$)

$$EIz' = \frac{17.4}{2}(x^2) - 2(x - 1.75)^3 + 2(x - 9.75)^3 + \frac{206.6}{2}(x - 11.5)^2 + C_3 \quad (2)$$

$$EIz = \frac{17.4}{6}(x^3) - \frac{1}{2}(x - 1.75)^4 + \frac{1}{2}(x - 9.75)^4 + \frac{206.6}{6}(x - 11.5)^3 + C_3x + C_4$$

$$z = 0 \text{ at } x = 0 \quad \Rightarrow \quad C_4 = 0$$

$$z = 0 \text{ at } x = 11.5 \quad \Rightarrow \quad C_3 = 8.975 \text{ lbf} \cdot \text{in}^3$$

From (2)

$$x = 0: \quad EIz' = 8.975$$

$$x = 11.5: \quad EIz' = -683.5$$

At O: $EI\theta = \sqrt{1908.4^2 + 8.975^2} = 1908.4 \text{ lbf} \cdot \text{in}^3$

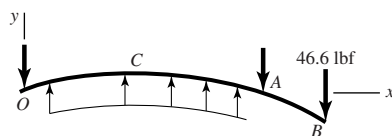
A: $EI\theta = \sqrt{(-2153.1)^2 + (-683.5)^2} = 2259 \text{ lbf} \cdot \text{in}^3 \quad (\text{dictates size})$

$$\theta = \frac{2259}{30(10^6)(\pi/64)(1.25^4)} = 0.000628 \text{ rad}$$

$$n = \frac{0.001}{0.000628} = 1.59$$

At gear mesh, B

xy plane



With $I = I_1$ in section OCA,

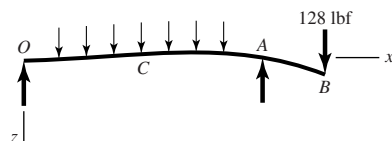
$$y'_A = -2153.1/EI_1$$

Since $y'_{B/A}$ is a cantilever, from Table A-9-1, with $I = I_2$ in section AB

$$y'_{B/A} = \frac{Fx(x-2l)}{2EI_2} = \frac{46.6}{2EI_2}(2.75)[2.75 - 2(2.75)] = -176.2/EI_2$$

$$\begin{aligned} \therefore y'_B &= y'_A + y'_{B/A} = -\frac{2153.1}{30(10^6)(\pi/64)(1.25^4)} - \frac{176.2}{30(10^6)(\pi/64)(0.875^4)} \\ &= -0.000803 \text{ rad (magnitude greater than } 0.0005 \text{ rad)} \end{aligned}$$

xz plane



$$z'_A = -\frac{683.5}{EI_1}, \quad z'_{B/A} = -\frac{128(2.75^2)}{2EI_2} = -\frac{484}{EI_2}$$

$$z'_B = -\frac{683.5}{30(10^6)(\pi/64)(1.25^4)} - \frac{484}{30(10^6)(\pi/64)(0.875^4)} = -0.000751 \text{ rad}$$

$$\theta_B = \sqrt{(-0.000803)^2 + (0.000751)^2} = 0.00110 \text{ rad}$$

Crowned teeth must be used.

Finite element results:	Error in simplified model
$\theta_O = 5.47(10^{-4}) \text{ rad}$	3.0%
$\theta_A = 7.09(10^{-4}) \text{ rad}$	11.4%
$\theta_B = 1.10(10^{-3}) \text{ rad}$	0.0%

The simplified model yielded reasonable results.

Strength $S_{ut} = 72 \text{ kpsi}, \quad S_y = 39.5 \text{ kpsi}$

At the shoulder at A, $x = 10.75 \text{ in.}$ From Prob. 7-4,

$$M_{xy} = -209.3 \text{ lbf} \cdot \text{in}, \quad M_{xz} = -293.0 \text{ lbf} \cdot \text{in}, \quad T = 192 \text{ lbf} \cdot \text{in}$$

$$M = \sqrt{(-209.3)^2 + (-293)^2} = 360.0 \text{ lbf} \cdot \text{in}$$

$$S'_e = 0.5(72) = 36 \text{ kpsi}$$

$$k_a = 2.70(72)^{-0.265} = 0.869$$

$$k_b = \left(\frac{1}{0.3}\right)^{-0.107} = 0.879$$

$$k_c = k_d = k_e = k_f = 1$$

$$S_e = 0.869(0.879)(36) = 27.5 \text{ kpsi}$$

From Fig. A-15-8 with $D/d = 1.25$ and $r/d = 0.03$, $K_{ts} = 1.8$.

From Fig. A-15-9 with $D/d = 1.25$ and $r/d = 0.03$, $K_t = 2.3$

From Fig. 6-20 with $r = 0.03$ in, $q = 0.65$.

From Fig. 6-21 with $r = 0.03$ in, $q_s = 0.83$

$$\text{Eq. (6-31):} \quad K_f = 1 + 0.65(2.3 - 1) = 1.85$$

$$K_{fs} = 1 + 0.83(1.8 - 1) = 1.66$$

Using DE-elliptic, Eq. (7-11) with $M_m = T_a = 0$,

$$\frac{1}{n} = \frac{16}{\pi(1^3)} \left\{ 4 \left[\frac{1.85(360)}{27\,500} \right]^2 + 3 \left[\frac{1.66(192)}{39\,500} \right]^2 \right\}^{1/2}$$

$$n = 3.89$$

Perform a similar analysis at the profile keyway under the gear.

The main problem with the design is the undersized shaft overhang with excessive slope at the gear. The use of crowned-teeth in the gears will eliminate this problem.

7-7 (a) One possible shaft layout is shown. Both bearings and the gear will be located against shoulders. The gear and the motor will transmit the torque through keys. The bearings can be lightly pressed onto the shaft. The left bearing will locate the shaft in the housing, while the right bearing will float in the housing.

(b) From summing moments around the shaft axis, the tangential transmitted load through the gear will be

$$W_t = T/(d/2) = 2500/(4/2) = 1250 \text{ lbf}$$

The radial component of gear force is related by the pressure angle.

$$W_r = W_t \tan \phi = 1250 \tan 20^\circ = 455 \text{ lbf}$$

$$W = [W_r^2 + W_t^2]^{1/2} = (455^2 + 1250^2)^{1/2} = 1330 \text{ lbf}$$

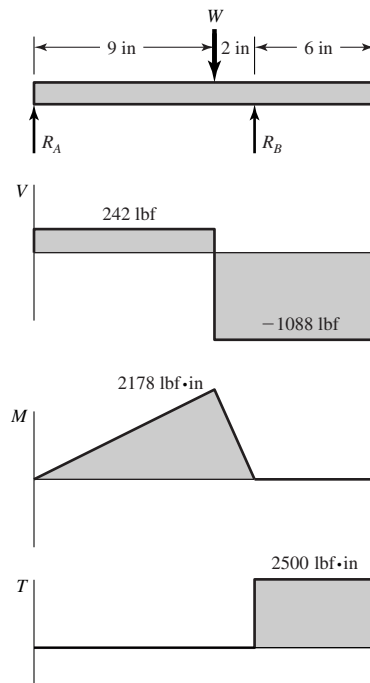
Reactions R_A and R_B , and the load W are all in the same plane. From force and moment balance,

$$R_A = 1330(2/11) = 242 \text{ lbf}$$

$$R_B = 1330(9/11) = 1088 \text{ lbf}$$

$$M_{\max} = R_A(9) = (242)(9) = 2178 \text{ lbf} \cdot \text{in}$$

Shear force, bending moment, and torque diagrams can now be obtained.



Ans.

- (c) Potential critical locations occur at each stress concentration (shoulders and keyways). To be thorough, the stress at each potentially critical location should be evaluated. For now, we will choose the most likely critical location, by observation of the loading situation, to be in the keyway for the gear. At this point there is a large stress concentration, a large bending moment, and the torque is present. The other locations either have small bending moments, or no torque. The stress concentration for the keyway is highest at the ends. For simplicity, and to be conservative, we will use the maximum bending moment, even though it will have dropped off a little at the end of the keyway.
- (d) At the gear keyway, approximately 9 in from the left end of the shaft, the bending is completely reversed and the torque is steady.

$$M_a = 2178 \text{ lbf} \cdot \text{in} \quad T_m = 2500 \text{ lbf} \cdot \text{in} \quad M_m = T_a = 0$$

From Table 7-1, estimate stress concentrations for the end-milled keyseat to be $K_t = 2.2$ and $K_{ts} = 3.0$. For the relatively low strength steel specified (AISI 1020 CD), estimate notch sensitivities of $q = 0.75$ and $q_s = 0.9$, obtained by observation of Figs. 6-20 and 6-21. Assuming a typical radius at the bottom of the keyseat of $r/d = 0.02$ (p. 361), these estimates for notch sensitivity are good for up to about 3 in shaft diameter.

$$\text{Eq. (6-32):} \quad K_f = 1 + 0.75(2.2 - 1) = 1.9$$

$$K_{fs} = 1 + 0.9(3.0 - 1) = 2.8$$

$$\text{Eq. (6-19):} \quad k_a = 2.70(68)^{-0.265} = 0.883$$

For estimating k_b , guess $d = 2$ in.

$$k_b = (2/0.3)^{-0.107} = 0.816$$

$$S_e = (0.883)(0.816)(0.5)(68) = 24.5 \text{ kpsi}$$

Selecting the DE-Goodman criteria for a conservative first design,

$$\text{Eq. (7-8): } d = \left[\frac{16n}{\pi} \left\{ \frac{[4(K_f M_a)^2]^{1/2}}{S_e} + \frac{[3(K_{fs} T_m)^2]^{1/2}}{S_{ut}} \right\} \right]^{1/3}$$

$$d = \left[\frac{16n}{\pi} \left\{ \frac{[4(1.9 \cdot 2178)^2]^{1/2}}{24\,500} + \frac{[3(2.8 \cdot 2500)^2]^{1/2}}{68\,000} \right\} \right]^{1/3}$$

$$d = 1.58 \text{ in } \textit{Ans.}$$

With this diameter, the estimates for notch sensitivity and size factor were conservative, but close enough for a first iteration until deflections are checked.

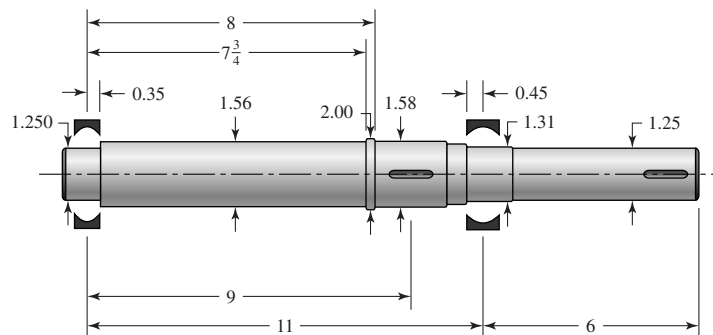
Check for static failure.

$$\text{Eq. (7-15): } \sigma'_{\max} = \left[\left(\frac{32K_f M_a}{\pi d^3} \right)^2 + 3 \left(\frac{16K_{fs} T_m}{\pi d^3} \right)^2 \right]^{1/2}$$

$$\sigma'_{\max} = \left[\left(\frac{32(1.9)(2178)}{\pi(1.58)^3} \right)^2 + 3 \left(\frac{16(2.8)(2500)}{\pi(1.58)^3} \right)^2 \right]^{1/2} = 19.0 \text{ kpsi}$$

$$n_y = S_y / \sigma'_{\max} = 57 / 19.0 = 3.0 \textit{ Ans.}$$

- (e) Now estimate other diameters to provide typical shoulder supports for the gear and bearings (p. 360). Also, estimate the gear and bearing widths.



- (f) Entering this shaft geometry into beam analysis software (or Finite Element software), the following deflections are determined:

Left bearing slope:	0.000532 rad
Right bearing slope:	-0.000850 rad
Gear slope:	-0.000545 rad
Right end of shaft slope:	-0.000850 rad
Gear deflection:	-0.00145 in
Right end of shaft deflection:	0.00510 in

Comparing these deflections to the recommendations in Table 7-2, everything is within typical range except the gear slope is a little high for an uncrowned gear.

- (g) To use a non-crowned gear, the gear slope is recommended to be less than 0.0005 rad. Since all other deflections are acceptable, we will target an increase in diameter only for the long section between the left bearing and the gear. Increasing this diameter from the proposed 1.56 in to 1.75 in, produces a gear slope of -0.000401 rad. All other deflections are improved as well.

7-8 (a) Use the distortion-energy elliptic failure locus. The torque and moment loadings on the shaft are shown in the solution to Prob. 7-7.

Candidate critical locations for strength:

- Pinion seat keyway
- Right bearing shoulder
- Coupling keyway

Table A-20 for 1030 HR: $S_{ut} = 68$ kpsi, $S_y = 37.5$ kpsi, $H_B = 137$

Eq. (6-8): $S'_e = 0.5(68) = 34.0$ kpsi

Eq. (6-19): $k_a = 2.70(68)^{-0.265} = 0.883$

$$k_c = k_d = k_e = 1$$

Pinion seat keyway

See Table 7-1 for keyway stress concentration factors

$$\left. \begin{array}{l} K_t = 2.2 \\ K_{ts} = 3.0 \end{array} \right\} \text{Profile keyway}$$

For an end-mill profile keyway cutter of 0.010 in radius,

From Fig. 6-20: $q = 0.50$

From Fig. 6-21: $q_s = 0.65$

Eq. (6-32):

$$\begin{aligned} K_{fs} &= 1 + q_s(K_{ts} - 1) \\ &= 1 + 0.65(3.0 - 1) = 2.3 \end{aligned}$$

$$K_f = 1 + 0.50(2.2 - 1) = 1.6$$

Eq. (6-20): $k_b = \left(\frac{1.875}{0.30} \right)^{-0.107} = 0.822$

Eq. (6-18): $S_e = 0.883(0.822)(34.0) = 24.7$ kpsi

Eq. (7-11):

$$\begin{aligned} \frac{1}{n} &= \frac{16}{\pi(1.875^3)} \left\{ 4 \left[\frac{1.6(2178)}{24\,700} \right]^2 + 3 \left[\frac{2.3(2500)}{37\,500} \right]^2 \right\}^{1/2} \\ &= 0.353, \quad \text{from which } n = 2.83 \end{aligned}$$

Right-hand bearing shoulder

The text does not give minimum and maximum shoulder diameters for 03-series bearings (roller). Use $D = 1.75$ in.

$$\frac{r}{d} = \frac{0.030}{1.574} = 0.019, \quad \frac{D}{d} = \frac{1.75}{1.574} = 1.11$$

From Fig. A-15-9,

$$K_t = 2.4$$

From Fig. A-15-8,

$$K_{ts} = 1.6$$

From Fig. 6-20,

$$q = 0.65$$

From Fig. 6-21,

$$q_s = 0.83$$

$$K_f = 1 + 0.65(2.4 - 1) = 1.91$$

$$K_{fs} = 1 + 0.83(1.6 - 1) = 1.50$$

$$M = 2178 \left(\frac{0.453}{2} \right) = 493 \text{ lbf} \cdot \text{in}$$

Eq. (7-11):

$$\begin{aligned} \frac{1}{n} &= \frac{16}{\pi(1.574^3)} \left[4 \left(\frac{1.91(493)}{24\,700} \right)^2 + 3 \left(\frac{1.50(2500)}{37\,500} \right)^2 \right]^{1/2} \\ &= 0.247, \quad \text{from which } n = 4.05 \end{aligned}$$

Overhanging coupling keyway

There is no bending moment, thus Eq. (7-11) reduces to:

$$\begin{aligned} \frac{1}{n} &= \frac{16\sqrt{3}K_{fs}T_m}{\pi d^3 S_y} = \frac{16\sqrt{3}(1.50)(2500)}{\pi(1.5^3)(37\,500)} \\ &= 0.261 \quad \text{from which } n = 3.83 \end{aligned}$$

- (b) One could take pains to model this shaft exactly, using say finite element software. However, for the bearings and the gear, the shaft is basically of uniform diameter, 1.875 in. The reductions in diameter at the bearings will change the results insignificantly. Use $E = 30(10^6)$ psi.

To the left of the load:

$$\begin{aligned} \theta_{AB} &= \frac{Fb}{6EI} (3x^2 + b^2 - l^2) \\ &= \frac{1449(2)(3x^2 + 2^2 - 11^2)}{6(30)(10^6)(\pi/64)(1.825^4)(11)} \\ &= 2.4124(10^{-6})(3x^2 - 117) \end{aligned}$$

$$\text{At } x = 0: \quad \theta = -2.823(10^{-4}) \text{ rad}$$

$$\text{At } x = 9 \text{ in:} \quad \theta = 3.040(10^{-4}) \text{ rad}$$

$$\begin{aligned} \text{At } x = 11 \text{ in:} \quad \theta &= \frac{1449(9)(11^2 - 9^2)}{6(30)(10^6)(\pi/64)(1.875^4)(11)} \\ &= 4.342(10^{-4}) \text{ rad} \end{aligned}$$

Obtain allowable slopes from Table 7-2.

Left bearing:

$$\begin{aligned} n_{fs} &= \frac{\text{Allowable slope}}{\text{Actual slope}} \\ &= \frac{0.001}{0.0002823} = 3.54 \end{aligned}$$

Right bearing:

$$n_{fs} = \frac{0.0008}{0.0004342} = 1.84$$

Gear mesh slope:

Table 7-2 recommends a minimum relative slope of 0.0005 rad. While we don't know the slope on the next shaft, we know that it will need to have a larger diameter and be stiffer. At the moment we can say

$$n_{fs} < \frac{0.0005}{0.000304} = 1.64$$

7-9 The solution to Problem 7-8 may be used as an example of the analysis process for a similar situation.

7-10 If you have a finite element program available, it is highly recommended. Beam deflection programs can be implemented but this is time consuming and the programs have narrow applications. Here we will demonstrate how the problem can be simplified and solved using singularity functions.

Deflection: First we will ignore the steps near the bearings where the bending moments are low. Thus let the 30 mm dia. be 35 mm. Secondly, the 55 mm dia. is very thin, 10 mm. The full bending stresses will not develop at the outer fibers so full stiffness will not develop either. Thus, ignore this step and let the diameter be 45 mm.

Statics: Left support: $R_1 = 7(315 - 140)/315 = 3.889 \text{ kN}$

Right support: $R_2 = 7(140)/315 = 3.111 \text{ kN}$

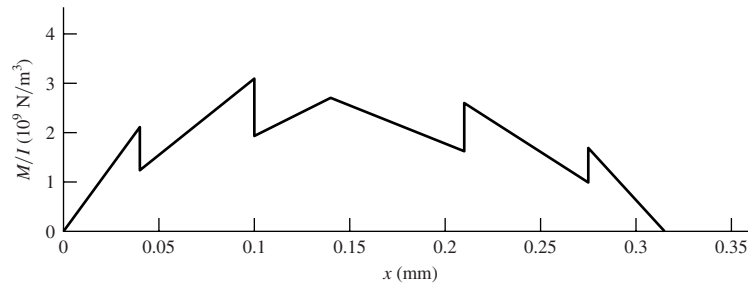
Determine the bending moment at each step.

$x(\text{mm})$	0	40	100	140	210	275	315
$M(\text{N} \cdot \text{m})$	0	155.56	388.89	544.44	326.67	124.44	0

$$I_{35} = (\pi/64)(0.035^4) = 7.366(10^{-8}) \text{ m}^4, \quad I_{40} = 1.257(10^{-7}) \text{ m}^4, \quad I_{45} = 2.013(10^{-7}) \text{ m}^4$$

Plot M/I as a function of x .

x (m)	$M/I(10^9 \text{ N/m}^3)$	Step	Slope	Δ Slope
0	0		52.8	
0.04	2.112			
0.04	1.2375	-0.8745	30.942	-21.86
0.1	3.094			
0.1	1.932	-1.162	19.325	-11.617
0.14	2.705			
0.14	2.705	0	-15.457	-34.78
0.21	1.623			
0.21	2.6	0.977	-24.769	-9.312
0.275	0.99			
0.275	1.6894	0.6994	-42.235	-17.47
0.315	0			



The steps and the change of slopes are evaluated in the table. From these, the function M/I can be generated:

$$M/I = [52.8x - 0.8745\langle x - 0.04 \rangle^0 - 21.86\langle x - 0.04 \rangle^1 - 1.162\langle x - 0.1 \rangle^0 - 11.617\langle x - 0.1 \rangle^1 - 34.78\langle x - 0.14 \rangle^1 + 0.977\langle x - 0.21 \rangle^0 - 9.312\langle x - 0.21 \rangle^1 + 0.6994\langle x - 0.275 \rangle^0 - 17.47\langle x - 0.275 \rangle^1] 10^9$$

Integrate twice:

$$E \frac{dy}{dx} = [26.4x^2 - 0.8745\langle x - 0.04 \rangle^1 - 10.93\langle x - 0.04 \rangle^2 - 1.162\langle x - 0.1 \rangle^1 - 5.81\langle x - 0.1 \rangle^2 - 17.39\langle x - 0.14 \rangle^2 + 0.977\langle x - 0.21 \rangle^1 - 4.655\langle x - 0.21 \rangle^2 + 0.6994\langle x - 0.275 \rangle^1 - 8.735\langle x - 0.275 \rangle^2 + C_1] 10^9 \quad (1)$$

$$Ey = [8.8x^3 - 0.4373\langle x - 0.04 \rangle^2 - 3.643\langle x - 0.04 \rangle^3 - 0.581\langle x - 0.1 \rangle^2 - 1.937\langle x - 0.1 \rangle^3 - 5.797\langle x - 0.14 \rangle^3 + 0.4885\langle x - 0.21 \rangle^2 - 1.552\langle x - 0.21 \rangle^3 + 0.3497\langle x - 0.275 \rangle^2 - 2.912\langle x - 0.275 \rangle^3 + C_1x + C_2] 10^9$$

Boundary conditions: $y = 0$ at $x = 0$ yields $C_2 = 0$;

$$y = 0 \text{ at } x = 0.315 \text{ m yields } C_1 = -0.29525 \text{ N/m}^2.$$

Equation (1) with $C_1 = -0.29525$ provides the slopes at the bearings and gear. The following table gives the results in the second column. The third column gives the results from a similar finite element model. The fourth column gives the result of a full model which models the 35 and 55 mm diameter steps.

x (mm)	θ (rad)	F.E. Model	Full F.E. Model
0	-0.001 4260	-0.001 4270	-0.001 4160
140	-0.000 1466	-0.000 1467	-0.000 1646
315	0.001 3120	0.001 3280	0.001 3150

The main discrepancy between the results is at the gear location ($x = 140$ mm). The larger value in the full model is caused by the stiffer 55 mm diameter step. As was stated earlier, this step is not as stiff as modeling implicates, so the exact answer is somewhere between the full model and the simplified model which in any event is a small value. As expected, modeling the 30 mm dia. as 35 mm does not affect the results much.

It can be seen that the allowable slopes at the bearings are exceeded. Thus, either the load has to be reduced or the shaft “beefed” up. If the allowable slope is 0.001 rad, then the maximum load should be $F_{\max} = (0.001/0.001\ 46)7 = 4.79$ kN. With a design factor this would be reduced further.

To increase the stiffness of the shaft, increase the diameters by $(0.001\ 46/0.001)^{1/4} = 1.097$, from Eq. (7-18). Form a table:

Old d , mm	20.00	30.00	35.00	40.00	45.00	55.00
New ideal d , mm	21.95	32.92	38.41	43.89	49.38	60.35
Rounded up d , mm	22.00	34.00	40.00	44.00	50.00	62.00

Repeating the full finite element model results in

$$\begin{aligned} x = 0: & \quad \theta = -9.30 \times 10^{-4} \text{ rad} \\ x = 140 \text{ mm}: & \quad \theta = -1.09 \times 10^{-4} \text{ rad} \\ x = 315 \text{ mm}: & \quad \theta = 8.65 \times 10^{-4} \text{ rad} \end{aligned}$$

Well within our goal. Have the students try a goal of 0.0005 rad at the bearings.

Strength: Due to stress concentrations and reduced shaft diameters, there are a number of locations to look at. A table of nominal stresses is given below. Note that torsion is only to the right of the 7 kN load. Using $\sigma = 32M/(\pi d^3)$ and $\tau = 16T/(\pi d^3)$,

x (mm)	0	15	40	100	110	140	210	275	300	330
σ (MPa)	0	22.0	37.0	61.9	47.8	60.9	52.0	39.6	17.6	0
τ (MPa)	0	0	0	0	0	6	8.5	12.7	20.2	68.1
σ' (MPa)	0	22.0	37.0	61.9	47.8	61.8	53.1	45.3	39.2	118.0

Table A-20 for AISI 1020 CD steel: $S_{ut} = 470$ MPa, $S_y = 390$ MPa

At $x = 210$ mm:

$$k_a = 4.51(470)^{-0.265} = 0.883, \quad k_b = (40/7.62)^{-0.107} = 0.837$$

$$S_e = 0.883(0.837)(0.5)(470) = 174 \text{ MPa}$$

$$D/d = 45/40 = 1.125, \quad r/d = 2/40 = 0.05.$$

From Figs. A-15-8 and A-15-9, $K_t = 1.9$ and $K_{ts} = 1.32$.

From Figs. 6-20 and 6-21, $q = 0.75$ and $q_s = 0.92$,

$$K_f = 1 + 0.75(1.9 - 1) = 1.68, \text{ and } K_{f_s} = 1 + 0.92(1.32 - 1) = 1.29.$$

From Eq. (7-11), with $M_m = T_a = 0$,

$$\frac{1}{n} = \frac{16}{\pi(0.04)^3} \left\{ 4 \left[\frac{1.68(326.67)}{174(10^6)} \right]^2 + 3 \left[\frac{1.29(107)}{390(10^6)} \right]^2 \right\}^{1/2}$$

$$n = 1.98$$

At $x = 330$ mm: The von Mises stress is the highest but it comes from the steady torque only.

$$D/d = 30/20 = 1.5, \quad r/d = 2/20 = 0.1 \quad \Rightarrow \quad K_{t_s} = 1.42,$$

$$q_s = 0.92 \quad \Rightarrow \quad K_{f_s} = 1.39$$

$$\frac{1}{n} = \frac{16}{\pi(0.02)^3} (\sqrt{3}) \left[\frac{1.39(107)}{390(10^6)} \right]$$

$$n = 2.38$$

Check the other locations.

If worse-case is at $x = 210$ mm, the changes discussed for the slope criterion will improve the strength issue.

7-11 and 7-12 With these design tasks each student will travel different paths and almost all details will differ. The important points are

- The student gets a blank piece of paper, a statement of function, and some constraints—explicit and implied. At this point in the course, this is a good experience.
- It is a good preparation for the capstone design course.
- The adequacy of their design must be demonstrated and possibly include a designer's notebook.
- Many of the fundamentals of the course, based on this text and this course, are useful. The student will find them useful and notice that he/she is doing it.
- Don't let the students create a time sink for themselves. Tell them how far you want them to go.

7-13 I used this task as a final exam when all of the students in the course had consistent test scores going into the final examination; it was my expectation that they would not change things much by taking the examination.

This problem is a learning experience. Following the task statement, the following guidance was added.

- Take the first half hour, resisting the temptation of putting pencil to paper, and decide what the problem really is.
- Take another twenty minutes to list several possible remedies.
- Pick one, and show your instructor how you would implement it.

The students' initial reaction is that he/she does not know much from the problem statement. Then, slowly the realization sets in that they do know some important things that the designer did not. They knew how it failed, where it failed, and that the design wasn't good enough; it was close, though.

Also, a fix at the bearing seat lead-in could transfer the problem to the shoulder fillet, and the problem may not be solved.

To many students' credit, they chose to keep the shaft geometry, and selected a new material to realize about twice the Brinell hardness.

7-14 In Eq. (7-24) set

$$I = \frac{\pi d^4}{64}, \quad A = \frac{\pi d^2}{4}$$

to obtain

$$\omega = \left(\frac{\pi}{l}\right)^2 \left(\frac{d}{4}\right) \sqrt{\frac{gE}{\gamma}} \quad (1)$$

or

$$d = \frac{4l^2\omega}{\pi^2} \sqrt{\frac{\gamma}{gE}} \quad (2)$$

(a) From Eq. (1) and Table A-5,

$$\omega = \left(\frac{\pi}{24}\right)^2 \left(\frac{1}{4}\right) \sqrt{\frac{386(30)(10^6)}{0.282}} = 868 \text{ rad/s} \quad \text{Ans.}$$

(b) From Eq. (2),

$$d = \frac{4(24)^2(2)(868)}{\pi^2} \sqrt{\frac{0.282}{386(30)(10^6)}} = 2 \text{ in} \quad \text{Ans.}$$

(c) From Eq. (2),

$$l\omega = \frac{\pi^2 d}{4 l} \sqrt{\frac{gE}{\gamma}}$$

Since d/l is the same regardless of the scale.

$$l\omega = \text{constant} = 24(868) = 20\,832$$

$$\omega = \frac{20\,832}{12} = 1736 \text{ rad/s} \quad \text{Ans.}$$

Thus the first critical speed doubles.

7-15 From Prob. 7-14, $\omega = 868 \text{ rad/s}$

$$A = 0.7854 \text{ in}^2, \quad I = 0.04909 \text{ in}^4, \quad \gamma = 0.282 \text{ lbf/in}^3,$$

$$E = 30(10^6) \text{ psi}, \quad w = A\gamma l = 0.7854(0.282)(24) = 5.316 \text{ lbf}$$

One element:

$$\text{Eq. (7-24)} \quad \delta_{11} = \frac{12(12)(24^2 - 12^2 - 12^2)}{6(30)(10^6)(0.04909)(24)} = 1.956(10^{-4}) \text{ in/lbf}$$

$$y_1 = w_1 \delta_{11} = 5.316(1.956)(10^{-4}) = 1.0398(10^{-3}) \text{ in}$$

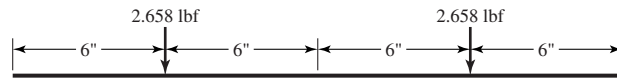
$$y_1^2 = 1.0812(10^{-6})$$

$$\sum wy = 5.316(1.0398)(10^{-3}) = 5.528(10^{-3})$$

$$\sum wy^2 = 5.316(1.0812)(10^{-6}) = 5.748(10^{-6})$$

$$\omega_1 = \sqrt{g \frac{\sum wy}{\sum wy^2}} = \sqrt{386 \left[\frac{5.528(10^{-3})}{5.748(10^{-6})} \right]} = 609 \text{ rad/s} \quad (30\% \text{ low})$$

Two elements:



$$\delta_{11} = \delta_{22} = \frac{18(6)(24^2 - 18^2 - 6^2)}{6(30)(10^6)(0.04909)(24)} = 1.100(10^{-4}) \text{ in/lbf}$$

$$\delta_{12} = \delta_{21} = \frac{6(6)(24^2 - 6^2 - 6^2)}{6(30)(10^6)(0.04909)(24)} = 8.556(10^{-5}) \text{ in/lbf}$$

$$y_1 = w_1 \delta_{11} + w_2 \delta_{12} = 2.658(1.100)(10^{-4}) + 2.658(8.556)(10^{-5}) \\ = 5.198(10^{-4}) \text{ in} = y_2,$$

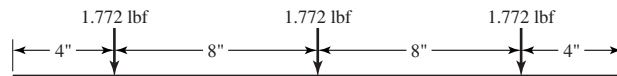
$$y_1^2 = y_2^2 = 2.702(10^{-7}) \text{ in}^2$$

$$\sum wy = 2(2.658)(5.198)(10^{-4}) = 2.763(10^{-3})$$

$$\sum wy^2 = 2(2.658)(2.702)(10^{-7}) = 1.436(10^{-6})$$

$$\omega_1 = \sqrt{386 \left[\frac{2.763(10^{-3})}{1.436(10^{-6})} \right]} = 862 \text{ rad/s} \quad (0.7\% \text{ low})$$

Three elements:



$$\delta_{11} = \delta_{33} = \frac{20(4)(24^2 - 20^2 - 4^2)}{6(30)(10^6)(0.04909)(24)} = 6.036(10^{-5}) \text{ in/lbf}$$

$$\delta_{22} = \frac{12(12)(24^2 - 12^2 - 12^2)}{6(30)(10^6)(0.04909)(24)} = 1.956(10^{-4}) \text{ in/lbf}$$

$$\delta_{12} = \delta_{32} = \frac{12(4)(24^2 - 12^2 - 4^2)}{6(30)(10^6)(0.04909)(24)} = 9.416(10^{-5}) \text{ in/lbf}$$

$$\delta_{13} = \frac{4(4)(24^2 - 4^2 - 4^2)}{6(30)(10^6)(0.04909)(24)} = 4.104(10^{-5}) \text{ in/lbf}$$

$$\begin{aligned}
 y_1 &= 1.772[6.036(10^{-5}) + 9.416(10^{-5}) + 4.104(10^{-5})] = 3.465(10^{-4}) \text{ in} \\
 y_2 &= 1.772[9.416(10^{-5}) + 1.956(10^{-4}) + 9.416(10^{-5})] = 6.803(10^{-4}) \text{ in} \\
 y_3 &= 1.772[4.104(10^{-5}) + 9.416(10^{-5}) + 6.036(10^{-5})] = 3.465(10^{-4}) \text{ in} \\
 \sum wy &= 2.433(10^{-3}), \quad \sum wy^2 = 1.246(10^{-6})
 \end{aligned}$$

$$\omega_1 = \sqrt{386 \left[\frac{2.433(10^{-3})}{1.246(10^{-6})} \right]} = 868 \text{ rad/s} \quad (\text{same as in Prob. 7-14})$$

The point was to show that convergence is rapid using a static deflection beam equation. The method works because:

- If a deflection curve is chosen which meets the boundary conditions of moment-free and deflection-free ends, and in this problem, of symmetry, the strain energy is not very sensitive to the equation used.
- Since the static bending equation is available, and meets the moment-free and deflection-free ends, it works.

7-16 (a) For two bodies, Eq. (7-26) is

$$\begin{vmatrix} (m_1\delta_{11} - 1/\omega^2) & m_2\delta_{12} \\ m_1\delta_{21} & (m_2\delta_{22} - 1/\omega^2) \end{vmatrix} = 0$$

Expanding the determinant yields,

$$\left(\frac{1}{\omega^2}\right)^2 - (m_1\delta_{11} + m_2\delta_{22})\left(\frac{1}{\omega^2}\right) + m_1m_2(\delta_{11}\delta_{22} - \delta_{12}\delta_{21}) = 0 \quad (1)$$

Eq. (1) has two roots $1/\omega_1^2$ and $1/\omega_2^2$. Thus

$$\left(\frac{1}{\omega^2} - \frac{1}{\omega_1^2}\right)\left(\frac{1}{\omega^2} - \frac{1}{\omega_2^2}\right) = 0$$

or,

$$\left(\frac{1}{\omega^2}\right)^2 + \left(\frac{1}{\omega_1^2} + \frac{1}{\omega_2^2}\right)\left(\frac{1}{\omega}\right) + \left(\frac{1}{\omega_1^2}\right)\left(\frac{1}{\omega_2^2}\right) = 0 \quad (2)$$

Equate the third terms of Eqs. (1) and (2), which must be identical.

$$\frac{1}{\omega_1^2} \frac{1}{\omega_2^2} = m_1m_2(\delta_{11}\delta_{22} - \delta_{12}\delta_{21}) \quad \Rightarrow \quad \frac{1}{\omega_2^2} = \omega_1^2 m_1m_2(\delta_{11}\delta_{22} - \delta_{12}\delta_{21})$$

and it follows that

$$\omega_2 = \frac{1}{\omega_1} \sqrt{\frac{g^2}{w_1w_2(\delta_{11}\delta_{22} - \delta_{12}\delta_{21})}} \quad \text{Ans.}$$

(b) In Ex. 7-5, Part (b) the first critical speed of the two-disk shaft ($w_1 = 35$ lbf, $w_2 = 55$ lbf) is $\omega_1 = 124.7$ rad/s. From part (a), using influence coefficients

$$\omega_2 = \frac{1}{124.7} \sqrt{\frac{386^2}{35(55)[2.061(3.534) - 2.234^2](10^{-8})}} = 466 \text{ rad/s} \quad \text{Ans.}$$

7-17 In Eq. (7-22) the term $\sqrt{I/A}$ appears. For a hollow uniform diameter shaft,

$$\sqrt{\frac{I}{A}} = \sqrt{\frac{\pi(d_o^4 - d_i^4)/64}{\pi(d_o^2 - d_i^2)/4}} = \sqrt{\frac{1}{16} \frac{(d_o^2 + d_i^2)(d_o^2 - d_i^2)}{d_o^2 - d_i^2}} = \frac{1}{4} \sqrt{d_o^2 + d_i^2}$$

This means that when a solid shaft is hollowed out, the critical speed increases beyond that of the solid shaft. By how much?

$$\frac{\frac{1}{4} \sqrt{d_o^2 + d_i^2}}{\frac{1}{4} \sqrt{d_o^2}} = \sqrt{1 + \left(\frac{d_i}{d_o}\right)^2}$$

The possible values of d_i are $0 \leq d_i \leq d_o$, so the range of critical speeds is

$$\omega_s \sqrt{1+0} \text{ to about } \omega_s \sqrt{1+1}$$

or from ω_s to $\sqrt{2}\omega_s$. *Ans.*

7-18 All steps will be modeled using singularity functions with a spreadsheet. Programming both loads will enable the user to first set the left load to 1, the right load to 0 and calculate δ_{11} and δ_{21} . Then setting left load to 0 and the right to 1 to get δ_{12} and δ_{22} . The spreadsheet shown on the next page shows the δ_{11} and δ_{21} calculation. Table for M/I vs x is easy to make. The equation for M/I is:

$$\begin{aligned} M/I = & D13x + C15\langle x - 1 \rangle^0 + E15\langle x - 1 \rangle^1 + E17\langle x - 2 \rangle^1 \\ & + C19\langle x - 9 \rangle^0 + E19\langle x - 9 \rangle^1 + E21\langle x - 14 \rangle^1 \\ & + C23\langle x - 15 \rangle^0 + E23\langle x - 15 \rangle^1 \end{aligned}$$

Integrating twice gives the equation for Ey . Boundary conditions $y = 0$ at $x = 0$ and at $x = 16$ inches provide integration constants ($C_2 = 0$). Substitution back into the deflection equation at $x = 2, 14$ inches provides the δ 's. The results are: $\delta_{11} = 2.917(10^{-7})$, $\delta_{12} = \delta_{21} = 1.627(10^{-7})$, $\delta_{22} = 2.231(10^{-7})$. This can be verified by finite element analysis.

$$y_1 = 20(2.917)(10^{-7}) + 35(1.627)(10^{-7}) = 1.153(10^{-5})$$

$$y_2 = 20(1.627)(10^{-7}) + 35(2.231)(10^{-7}) = 1.106(10^{-5})$$

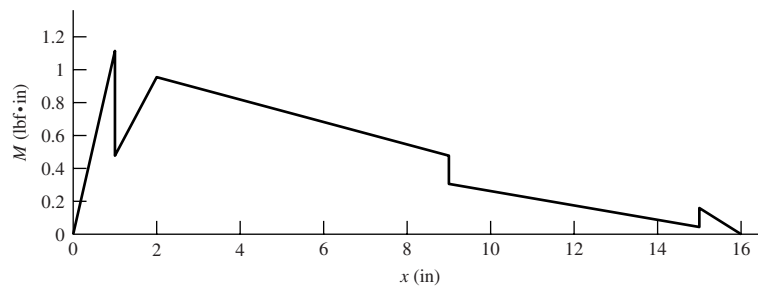
$$y_1^2 = 1.329(10^{-10}), \quad y_2^2 = 1.224(10^{-10})$$

$$\sum wy = 6.177(10^{-4}), \quad \sum wy^2 = 6.942(10^{-9})$$

Neglecting the shaft, Eq. (7-23) gives

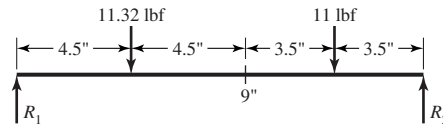
$$\omega_1 = \sqrt{386 \left[\frac{6.177(10^{-4})}{6.942(10^{-9})} \right]} = 5860 \text{ rad/s or } 55970 \text{ rev/min } \textit{Ans.}$$

	A	B	C	D	E	F	G	H	I
1	$F_1 = 1$		$F_2 = 0$		$R_1 = 0.875$ (left reaction)				
2									
3	x	M		$I_1 = I_4 = 0.7854$					
4	0	0		$I_2 = 1.833$					
5	1	0.875		$I_3 = 2.861$					
6	2	1.75							
7	9	0.875							
8	14	0.25							
9	15	0.125							
10	16	0							
11									
12	x	M/I	step	slope	Δ slope				
13	0	0		1.114 082					
14	1	1.114 082							
15	1	0.477 36	-0.636 722 477	0.477 36	-0.636 72				
16	2	0.954 719							
17	2	0.954 719	0	-0.068 19	-0.545 55				
18	9	0.477 36							
19	9	0.305 837	-0.171 522 4	-0.043 69	0.024 503				
20	14	0.087 382							
21	14	0.087 382	0	-0.043 69	0				
22	15	0.043 691							
23	15	0.159 155	0.115 463 554	-0.159 15	-0.115 46				
24	16	0							
25									
26		$C_1 = -4.906 001 093$							
27									
28									
29		$\delta_{11} = 2.91701E-07$							
30		$\delta_{21} = 1.6266E-07$							



Repeat for $F_1 = 0$ and $F_2 = 1$.

Modeling the shaft separately using 2 elements gives approximately



The spreadsheet can be easily modified to give

$$\begin{aligned} \delta_{11} &= 9.605(10^{-7}), & \delta_{12} = \delta_{21} &= 5.718(10^{-7}), & \delta_{22} &= 5.472(10^{-7}) \\ y_1 &= 1.716(10^{-5}), & y_2 &= 1.249(10^{-5}), & y_1^2 &= 2.946(10^{-10}), \\ y_2^2 &= 1.561(10^{-10}), & \sum wy &= 3.316(10^{-4}), & \sum wy^2 &= 5.052(10^{-9}) \\ \omega_1 &= \sqrt{386 \left[\frac{3.316(10^{-4})}{5.052(10^{-9})} \right]} = 5034 \text{ rad/s} \quad \text{Ans.} \end{aligned}$$

A finite element model of the exact shaft gives $\omega_1 = 5340$ rad/s. The simple model is 5.7% low.

Combination Using Dunkerley's equation, Eq. (7-32):

$$\frac{1}{\omega_1^2} = \frac{1}{5860^2} + \frac{1}{5034^2} \Rightarrow 3819 \text{ rad/s} \quad \text{Ans.}$$

7-19 We must not let the basis of the stress concentration factor, as presented, impose a viewpoint on the designer. Table A-16 shows K_{ts} as a decreasing monotonic as a function of a/D . All is not what it seems.

Let us change the basis for data presentation to the full section rather than the net section.

$$\begin{aligned} \tau &= K_{ts} \tau_0 = K'_{ts} \tau'_0 \\ K_{ts} &= \frac{32T}{\pi AD^3} = K'_{ts} \left(\frac{32T}{\pi D^3} \right) \end{aligned}$$

Therefore

$$K'_{ts} = \frac{K_{ts}}{A}$$

Form a table:

(a/D)	A	K_{ts}	K'_{ts}
0.050	0.95	1.77	1.86
0.075	0.93	1.71	1.84
0.100	0.92	1.68	1.83 ← minimum
0.125	0.89	1.64	1.84
0.150	0.87	1.62	1.86
0.175	0.85	1.60	1.88
0.200	0.83	1.58	1.90

K'_{ts} has the following attributes:

- It exhibits a minimum;
- It changes little over a wide range;
- Its minimum is a stationary point minimum at $a/D \doteq 0.100$;
- Our knowledge of the minima location is

$$0.075 \leq (a/D) \leq 0.125$$

We can form a design rule: in torsion, the pin diameter should be about 1/10 of the shaft diameter, for greatest shaft capacity. However, it is not catastrophic if one forgets the rule.

7-20 Choose 15 mm as basic size, D , d . Table 7-9: fit is designated as 15H7/h6. From Table A-11, the tolerance grades are $\Delta D = 0.018$ mm and $\Delta d = 0.011$ mm.

Hole: Eq. (7-36)

$$D_{\max} = D + \Delta D = 15 + 0.018 = 15.018 \text{ mm} \quad \text{Ans.}$$

$$D_{\min} = D = 15.000 \text{ mm} \quad \text{Ans.}$$

Shaft: From Table A-12, fundamental deviation $\delta_F = 0$. From Eq. (2-39)

$$d_{\max} = d + \delta_F = 15.000 + 0 = 15.000 \text{ mm} \quad \text{Ans.}$$

$$d_{\min} = d + \delta_R - \Delta d = 15.000 + 0 - 0.011 = 14.989 \text{ mm} \quad \text{Ans.}$$

7-21 Choose 45 mm as basic size. Table 7-9 designates fit as 45H7/s6. From Table A-11, the tolerance grades are $\Delta D = 0.025$ mm and $\Delta d = 0.016$ mm

Hole: Eq. (7-36)

$$D_{\max} = D + \Delta D = 45.000 + 0.025 = 45.025 \text{ mm} \quad \text{Ans.}$$

$$D_{\min} = D = 45.000 \text{ mm} \quad \text{Ans.}$$

Shaft: From Table A-12, fundamental deviation $\delta_F = +0.043$ mm. From Eq. (7-38)

$$d_{\min} = d + \delta_F = 45.000 + 0.043 = 45.043 \text{ mm} \quad \text{Ans.}$$

$$d_{\max} = d + \delta_F + \Delta d = 45.000 + 0.043 + 0.016 = 45.059 \text{ mm} \quad \text{Ans.}$$

7-22 Choose 50 mm as basic size. From Table 7-9 fit is 50H7/g6. From Table A-11, the tolerance grades are $\Delta D = 0.025$ mm and $\Delta d = 0.016$ mm.

Hole:

$$D_{\max} = D + \Delta D = 50 + 0.025 = 50.025 \text{ mm} \quad \text{Ans.}$$

$$D_{\min} = D = 50.000 \text{ mm} \quad \text{Ans.}$$

Shaft: From Table A-12 fundamental deviation = -0.009 mm

$$d_{\max} = d + \delta_F = 50.000 + (-0.009) = 49.991 \text{ mm} \quad \text{Ans.}$$

$$\begin{aligned} d_{\min} &= d + \delta_F - \Delta d \\ &= 50.000 + (-0.009) - 0.016 \\ &= 49.975 \text{ mm} \end{aligned}$$

7-23 Choose the basic size as 1.000 in. From Table 7-9, for 1.0 in, the fit is H8/f7. From Table A-13, the tolerance grades are $\Delta D = 0.0013$ in and $\Delta d = 0.0008$ in.

Hole:

$$D_{\max} = D + (\Delta D)_{\text{hole}} = 1.000 + 0.0013 = 1.0013 \text{ in} \quad \text{Ans.}$$

$$D_{\min} = D = 1.0000 \text{ in} \quad \text{Ans.}$$

Shaft: From Table A-14: Fundamental deviation = -0.0008 in

$$d_{\max} = d + \delta_F = 1.0000 + (-0.0008) = 0.9992 \text{ in} \quad \text{Ans.}$$

$$d_{\min} = d + \delta_F - \Delta d = 1.0000 + (-0.0008) - 0.0008 = 0.9984 \text{ in} \quad \text{Ans.}$$

Alternatively,

$$d_{\min} = d_{\max} - \Delta d = 0.9992 - 0.0008 = 0.9984 \text{ in.} \quad \text{Ans.}$$

7-24 (a) Basic size is $D = d = 1.5$ in.

Table 7-9: H7/s6 is specified for medium drive fit.

Table A-13: Tolerance grades are $\Delta D = 0.001$ in and $\Delta d = 0.0006$ in.

Table A-14: Fundamental deviation is $\delta_F = 0.0017$ in.

$$\text{Eq. (7-36): } D_{\max} = D + \Delta D = 1.501 \text{ in} \quad \text{Ans.}$$

$$D_{\min} = D = 1.500 \text{ in} \quad \text{Ans.}$$

$$\text{Eq. (7-37): } d_{\max} = d + \delta_F + \Delta d = 1.5 + 0.0017 + 0.0006 = 1.5023 \text{ in} \quad \text{Ans.}$$

$$\text{Eq. (7-38): } d_{\min} = d + \delta_F = 1.5 + 0.0017 = 1.5017 \text{ in} \quad \text{Ans.}$$

$$\text{(b) Eq. (7-42): } \delta_{\min} = d_{\min} - D_{\max} = 1.5017 - 1.501 = 0.0007 \text{ in}$$

$$\text{Eq. (7-43): } \delta_{\max} = d_{\max} - D_{\min} = 1.5023 - 1.500 = 0.0023 \text{ in}$$

$$\begin{aligned} \text{Eq. (7-40): } p_{\max} &= \frac{E\delta_{\max}}{2d^3} \left[\frac{(d_o^2 - d^2)(d^2 - d_i^2)}{d_o^2 - d_i^2} \right] \\ &= \frac{(30)(10^6)(0.0023)}{2(1.5)^3} \left[\frac{(2.5^2 - 1.5^2)(1.5^2 - 0)}{2.5^2 - 0} \right] = 14\,720 \text{ psi} \quad \text{Ans.} \end{aligned}$$

$$\begin{aligned} p_{\min} &= \frac{E\delta_{\min}}{2d^3} \left[\frac{(d_o^2 - d^2)(d^2 - d_i^2)}{d_o^2 - d_i^2} \right] \\ &= \frac{(30)(10^6)(0.0007)}{2(1.5)^3} \left[\frac{(2.5^2 - 1.5^2)(1.5^2 - 0)}{2.5^2 - 0} \right] = 4480 \text{ psi} \quad \text{Ans.} \end{aligned}$$

(c) For the shaft:

$$\text{Eq. (7-44): } \sigma_{t,\text{shaft}} = -p = -14\,720 \text{ psi}$$

$$\text{Eq. (7-46): } \sigma_{r,\text{shaft}} = -p = -14\,720 \text{ psi}$$

$$\begin{aligned} \text{Eq. (5-13): } \sigma' &= (\sigma_1^2 - \sigma_1\sigma_2 + \sigma_2^2)^{1/2} \\ &= [(-14\,720)^2 - (-14\,720)(-14\,720) + (-14\,720)^2]^{1/2} \\ &= 14\,720 \text{ psi} \end{aligned}$$

$$n = S_y/\sigma' = 57\,000/14\,720 = 3.9 \quad \text{Ans.}$$

For the hub:

$$\text{Eq. (7-45): } \sigma_{t,\text{hub}} = p \frac{d_o^2 + d^2}{d_o^2 - d^2} = (14\,720) \left(\frac{2.5^2 + 1.5^2}{2.5^2 - 1.5^2} \right) = 31\,280 \text{ psi}$$

$$\text{Eq. (7-46): } \sigma_{r,\text{hub}} = -p = -14\,720 \text{ psi}$$

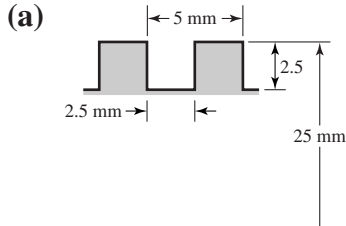
$$\text{Eq. (5-13): } \sigma' = (\sigma_1^2 - \sigma_1\sigma_2 + \sigma_2^2)^{1/2} \\ = [(31\,280)^2 - (31\,280)(-14\,720) + (-14\,720)^2]^{1/2} = 40\,689 \text{ psi}$$

$$n = S_y/\sigma' = 85\,000/40\,689 = 2.1 \quad \text{Ans.}$$

$$\text{(d) Eq. (7-49) } T = (\pi/2)fp_{\min}ld^2 \\ = (\pi/2)(0.3)(4480)(2)(1.5)^2 = 9500 \text{ lbf} \cdot \text{in} \quad \text{Ans.}$$

Chapter 8

8-1



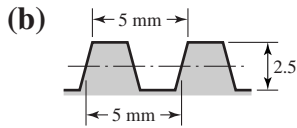
Thread depth = 2.5 mm *Ans.*

Width = 2.5 mm *Ans.*

$$d_m = 25 - 1.25 - 1.25 = 22.5 \text{ mm}$$

$$d_r = 25 - 5 = 20 \text{ mm}$$

$$l = p = 5 \text{ mm} \quad \textit{Ans.}$$



Thread depth = 2.5 mm *Ans.*

Width at pitch line = 2.5 mm *Ans.*

$$d_m = 22.5 \text{ mm}$$

$$d_r = 20 \text{ mm}$$

$$l = p = 5 \text{ mm} \quad \textit{Ans.}$$

8-2 From Table 8-1,

$$d_r = d - 1.226869p$$

$$d_m = d - 0.649519p$$

$$\bar{d} = \frac{d - 1.226869p + d - 0.649519p}{2} = d - 0.938194p$$

$$A_t = \frac{\pi \bar{d}^2}{4} = \frac{\pi}{4} (d - 0.938194p)^2 \quad \textit{Ans.}$$

8-3 From Eq. (c) of Sec. 8-2,

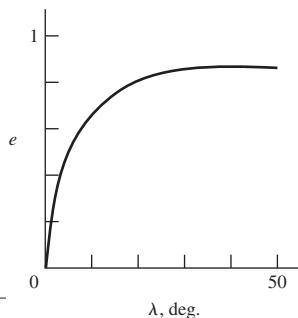
$$P = F \frac{\tan \lambda + f}{1 - f \tan \lambda}$$

$$T = \frac{Pd_m}{2} = \frac{Fd_m}{2} \frac{\tan \lambda + f}{1 - f \tan \lambda}$$

$$e = \frac{T_0}{T} = \frac{Fl/(2\pi)}{Fd_m/2} \frac{1 - f \tan \lambda}{\tan \lambda + f} = \tan \lambda \frac{1 - f \tan \lambda}{\tan \lambda + f} \quad \textit{Ans.}$$

Using $f = 0.08$, form a table and plot the efficiency curve.

λ , deg.	e
0	0
10	0.678
20	0.796
30	0.838
40	0.8517
45	0.8519



8-4 Given $F = 6 \text{ kN}$, $l = 5 \text{ mm}$, and $d_m = 22.5 \text{ mm}$, the torque required to raise the load is found using Eqs. (8-1) and (8-6)

$$T_R = \frac{6(22.5)}{2} \left[\frac{5 + \pi(0.08)(22.5)}{\pi(22.5) - 0.08(5)} \right] + \frac{6(0.05)(40)}{2}$$

$$= 10.23 + 6 = 16.23 \text{ N} \cdot \text{m} \quad \text{Ans.}$$

The torque required to lower the load, from Eqs. (8-2) and (8-6) is

$$T_L = \frac{6(22.5)}{2} \left[\frac{\pi(0.08)22.5 - 5}{\pi(22.5) + 0.08(5)} \right] + \frac{6(0.05)(40)}{2}$$

$$= 0.622 + 6 = 6.622 \text{ N} \cdot \text{m} \quad \text{Ans.}$$

Since T_L is positive, the thread is self-locking. The efficiency is

Eq. (8-4):
$$e = \frac{6(5)}{2\pi(16.23)} = 0.294 \quad \text{Ans.}$$

8-5 Collar (thrust) bearings, at the bottom of the screws, must bear on the collars. The bottom segment of the screws must be in compression. Where as tension specimens and their grips must be in tension. Both screws must be of the same-hand threads.

8-6 Screws rotate at an angular rate of

$$n = \frac{1720}{75} = 22.9 \text{ rev/min}$$

(a) The lead is 0.5 in, so the linear speed of the press head is

$$V = 22.9(0.5) = 11.5 \text{ in/min} \quad \text{Ans.}$$

(b) $F = 2500 \text{ lbf/screw}$

$$d_m = 3 - 0.25 = 2.75 \text{ in}$$

$$\sec \alpha = 1/\cos(29/2) = 1.033$$

Eq. (8-5):

$$T_R = \frac{2500(2.75)}{2} \left(\frac{0.5 + \pi(0.05)(2.75)(1.033)}{\pi(2.75) - 0.5(0.05)(1.033)} \right) = 377.6 \text{ lbf} \cdot \text{in}$$

Eq. (8-6):

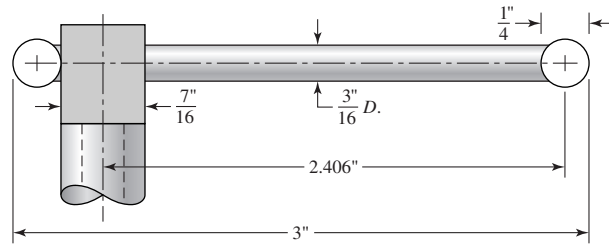
$$T_c = 2500(0.06)(5/2) = 375 \text{ lbf} \cdot \text{in}$$

$$T_{\text{total}} = 377.6 + 375 = 753 \text{ lbf} \cdot \text{in/screw}$$

$$T_{\text{motor}} = \frac{753(2)}{75(0.95)} = 21.1 \text{ lbf} \cdot \text{in}$$

$$H = \frac{Tn}{63\,025} = \frac{21.1(1720)}{63\,025} = 0.58 \text{ hp} \quad \text{Ans.}$$

8-7 The force F is perpendicular to the paper.



$$L = 3 - \frac{1}{8} - \frac{1}{4} - \frac{7}{32} = 2.406 \text{ in}$$

$$T = 2.406F$$

$$M = \left(L - \frac{7}{32} \right) F = \left(2.406 - \frac{7}{32} \right) F = 2.188F$$

$$S_y = 41 \text{ kpsi}$$

$$\sigma = S_y = \frac{32M}{\pi d^3} = \frac{32(2.188)F}{\pi(0.1875)^3} = 41\,000$$

$$F = 12.13 \text{ lbf}$$

$$T = 2.406(12.13) = 29.2 \text{ lbf} \cdot \text{in} \quad \text{Ans.}$$

(b) Eq. (8-5), $2\alpha = 60^\circ$, $l = 1/14 = 0.0714 \text{ in}$, $f = 0.075$, $\sec \alpha = 1.155$, $p = 1/14 \text{ in}$

$$d_m = \frac{7}{16} - 0.649519 \left(\frac{1}{14} \right) = 0.3911 \text{ in}$$

$$T_R = \frac{F_{\text{clamp}}(0.3911)}{2} \left(\frac{\text{Num}}{\text{Den}} \right)$$

$$\text{Num} = 0.0714 + \pi(0.075)(0.3911)(1.155)$$

$$\text{Den} = \pi(0.3911) - 0.075(0.0714)(1.155)$$

$$T = 0.02845 F_{\text{clamp}}$$

$$F_{\text{clamp}} = \frac{T}{0.02845} = \frac{29.2}{0.02845} = 1030 \text{ lbf} \quad \text{Ans.}$$

(c) The column has one end fixed and the other end pivoted. Base decision on the mean diameter column. Input: $C = 1.2$, $D = 0.391 \text{ in}$, $S_y = 41 \text{ kpsi}$, $E = 30(10^6) \text{ psi}$, $L = 4.1875 \text{ in}$, $k = D/4 = 0.09775 \text{ in}$, $L/k = 42.8$.

For this J. B. Johnson column, the critical load represents the limiting clamping force for buckling. Thus, $F_{\text{clamp}} = P_{\text{cr}} = 4663 \text{ lbf}$.

(d) This is a subject for class discussion.

8-8 $T = 6(2.75) = 16.5 \text{ lbf} \cdot \text{in}$

$$d_m = \frac{5}{8} - \frac{1}{12} = 0.5417 \text{ in}$$

$$l = \frac{1}{6} = 0.1667 \text{ in}, \quad \alpha = \frac{29^\circ}{2} = 14.5^\circ, \quad \sec 14.5^\circ = 1.033$$

$$\text{Eq. (8-5):} \quad T = 0.5417(F/2) \left[\frac{0.1667 + \pi(0.15)(0.5417)(1.033)}{\pi(0.5417) - 0.15(0.1667)(1.033)} \right] = 0.0696F$$

$$\begin{aligned} \text{Eq. (8-6):} \quad T_c &= 0.15(7/16)(F/2) = 0.03281F \\ T_{\text{total}} &= (0.0696 + 0.0328)F = 0.1024F \\ F &= \frac{16.5}{0.1024} = 161 \text{ lbf} \quad \text{Ans.} \end{aligned}$$

$$\mathbf{8-9} \quad d_m = 40 - 3 = 37 \text{ mm}, l = 2(6) = 12 \text{ mm}$$

From Eq. (8-1) and Eq. (8-6)

$$\begin{aligned} T_R &= \frac{10(37)}{2} \left[\frac{12 + \pi(0.10)(37)}{\pi(37) - 0.10(12)} \right] + \frac{10(0.15)(60)}{2} \\ &= 38.0 + 45 = 83.0 \text{ N} \cdot \text{m} \end{aligned}$$

Since $n = V/l = 48/12 = 4 \text{ rev/s}$

$$\omega = 2\pi n = 2\pi(4) = 8\pi \text{ rad/s}$$

so the power is

$$H = T\omega = 83.0(8\pi) = 2086 \text{ W} \quad \text{Ans.}$$

8-10

$$\text{(a)} \quad d_m = 36 - 3 = 33 \text{ mm}, l = p = 6 \text{ mm}$$

From Eqs. (8-1) and (8-6)

$$\begin{aligned} T &= \frac{33F}{2} \left[\frac{6 + \pi(0.14)(33)}{\pi(33) - 0.14(6)} \right] + \frac{0.09(90)F}{2} \\ &= (3.292 + 4.050)F = 7.34F \text{ N} \cdot \text{m} \end{aligned}$$

$$\omega = 2\pi n = 2\pi(1) = 2\pi \text{ rad/s}$$

$$H = T\omega$$

$$T = \frac{H}{\omega} = \frac{3000}{2\pi} = 477 \text{ N} \cdot \text{m}$$

$$F = \frac{477}{7.34} = 65.0 \text{ kN} \quad \text{Ans.}$$

$$\text{(b)} \quad e = \frac{Fl}{2\pi T} = \frac{65.0(6)}{2\pi(477)} = 0.130 \quad \text{Ans.}$$

8-11

$$\text{(a)} \quad L_T = 2D + \frac{1}{4} = 2(0.5) + 0.25 = 1.25 \text{ in} \quad \text{Ans.}$$

(b) From Table A-32 the washer thickness is 0.109 in. Thus,

$$l = 0.5 + 0.5 + 0.109 = 1.109 \text{ in} \quad \text{Ans.}$$

$$\text{(c)} \quad \text{From Table A-31, } H = \frac{7}{16} = 0.4375 \text{ in} \quad \text{Ans.}$$

(d) $l + H = 1.109 + 0.4375 = 1.5465$ in

This would be rounded to 1.75 in per Table A-17. The bolt is long enough. *Ans.*

(e) $l_d = L - L_T = 1.75 - 1.25 = 0.500$ in *Ans.*

$l_t = l - l_d = 1.109 - 0.500 = 0.609$ in *Ans.*

These lengths are needed to estimate bolt spring rate k_b .

Note: In an analysis problem, you need not know the fastener's length at the outset, although you can certainly check, if appropriate.

8-12

(a) $L_T = 2D + 6 = 2(14) + 6 = 34$ mm *Ans.*

(b) From Table A-33, the maximum washer thickness is 3.5 mm. Thus, the grip is,
 $l = 14 + 14 + 3.5 = 31.5$ mm *Ans.*

(c) From Table A-31, $H = 12.8$ mm

(d) $l + H = 31.5 + 12.8 = 44.3$ mm

Adding one or two threads and rounding up to $L = 50$ mm. The bolt is long enough.
Ans.

(e) $l_d = L - L_T = 50 - 34 = 16$ mm *Ans.*

$l_t = l - l_d = 31.5 - 16 = 15.5$ mm *Ans.*

These lengths are needed to estimate the bolt spring rate k_b .

8-13

(a) $L_T = 2D + \frac{1}{4} = 2(0.5) + 0.25 = 1.25$ in *Ans.*

(b) $l' > h + \frac{d}{2} = t_1 + \frac{d}{2} = 0.875 + \frac{0.5}{2} = 1.125$ in *Ans.*

(c) $L > h + 1.5d = t_1 + 1.5d = 0.875 + 1.5(0.5) = 1.625$ in

From Table A-17, this rounds to 1.75 in. The cap screw is long enough. *Ans.*

(d) $l_d = L - L_T = 1.75 - 1.25 = 0.500$ in *Ans.*

$l_t = l' - l_d = 1.125 - 0.5 = 0.625$ in *Ans.*

8-14

(a) $L_T = 2(12) + 6 = 30$ mm *Ans.*

(b) $l' = h + \frac{d}{2} = t_1 + \frac{d}{2} = 20 + \frac{12}{2} = 26$ mm *Ans.*

(c) $L > h + 1.5d = t_1 + 1.5d = 20 + 1.5(12) = 38$ mm

This rounds to 40 mm (Table A-17). The fastener is long enough. *Ans.*

(d) $l_d = L - L_T = 40 - 30 = 10$ mm *Ans.*

$l_t = l' - l_d = 26 - 10 = 16$ mm *Ans.*

8-15

(a)

$$A_d = 0.7854(0.75)^2 = 0.442 \text{ in}^2$$

$$A_{\text{tube}} = 0.7854(1.125^2 - 0.75^2) = 0.552 \text{ in}^2$$

$$k_b = \frac{A_d E}{\text{grip}} = \frac{0.442(30)(10^6)}{13} = 1.02(10^6) \text{ lbf/in} \quad \text{Ans.}$$

$$k_m = \frac{A_{\text{tube}} E}{13} = \frac{0.552(30)(10^6)}{13} = 1.27(10^6) \text{ lbf/in} \quad \text{Ans.}$$

$$C = \frac{1.02}{1.02 + 1.27} = 0.445 \quad \text{Ans.}$$

(b)

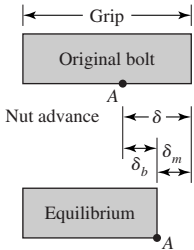


Diagram description: The diagram shows two states of a bolt and nut. The top state is labeled 'Original bolt' and shows a bolt with a 'Grip' length of 16 inches. A nut is advanced by a distance δ from its original position. The bottom state is labeled 'Equilibrium' and shows the bolt elongated by δ_b and the nut advanced by δ_m . The total nut advance is δ .

$$\delta = \frac{1}{16} \cdot \frac{1}{3} = \frac{1}{48} = 0.02083 \text{ in}$$

$$|\delta_b| = \left(\frac{|P|l}{AE} \right)_b = \frac{(13 - 0.02083)}{0.442(30)(10^6)} |P| = 9.79(10^{-7}) |P| \text{ in}$$

$$|\delta_m| = \left(\frac{|P|l}{AE} \right)_m = \frac{|P|(13)}{0.552(30)(10^6)} = 7.85(10^{-7}) |P| \text{ in}$$

$$|\delta_b| + |\delta_m| = \delta = 0.02083$$

$$9.79(10^{-7}) |P| + 7.85(10^{-7}) |P| = 0.02083$$

$$F_i = |P| = \frac{0.02083}{9.79(10^{-7}) + 7.85(10^{-7})} = 11810 \text{ lbf} \quad \text{Ans.}$$

(c) At opening load P_0

$$9.79(10^{-7}) P_0 = 0.02083$$

$$P_0 = \frac{0.02083}{9.79(10^{-7})} = 21280 \text{ lbf} \quad \text{Ans.}$$

As a check use $F_i = (1 - C)P_0$

$$P_0 = \frac{F_i}{1 - C} = \frac{11810}{1 - 0.445} = 21280 \text{ lbf}$$

8-16 The movement is known at one location when the nut is free to turn

$$\delta = pt = t/N$$

Letting N_t represent the turn of the nut from snug tight, $N_t = \theta/360^\circ$ and $\delta = N_t/N$.

The elongation of the bolt δ_b is

$$\delta_b = \frac{F_i}{k_b}$$

The advance of the nut along the bolt is the algebraic sum of $|\delta_b|$ and $|\delta_m|$

$$|\delta_b| + |\delta_m| = \frac{N_t}{N}$$

$$\frac{F_i}{k_b} + \frac{F_i}{k_m} = \frac{N_t}{N}$$

$$N_t = N F_i \left[\frac{1}{k_b} + \frac{1}{k_m} \right] = \left(\frac{k_b + k_m}{k_b k_m} \right) F_i N = \frac{\theta}{360^\circ} \quad \text{Ans.}$$

As a check invert Prob. 8-15. What Turn-of-Nut will induce $F_i = 11\,808$ lbf?

$$\begin{aligned} N_t &= 16(11\,808) \left(\frac{1}{1.02(10^6)} + \frac{1}{1.27(10^6)} \right) \\ &= 0.334 \text{ turns} \doteq 1/3 \text{ turn} \quad (\text{checks}) \end{aligned}$$

The relationship between the Turn-of-Nut method and the Torque Wrench method is as follows.

$$N_t = \left(\frac{k_b + k_m}{k_b k_m} \right) F_i N \quad (\text{Turn-of-Nut})$$

$$T = K F_i d \quad (\text{Torque Wrench})$$

Eliminate F_i

$$N_t = \left(\frac{k_b + k_m}{k_b k_m} \right) \frac{NT}{Kd} = \frac{\theta}{360^\circ} \quad \text{Ans.}$$

8-17

(a) From Ex. 8-4, $F_i = 14.4$ kip, $k_b = 5.21(10^6)$ lbf/in, $k_m = 8.95(10^6)$ lbf/in

Eq. (8-27): $T = k F_i d = 0.2(14.4)(10^3)(5/8) = 1800$ lbf · in *Ans.*

From Prob. 8-16,

$$\begin{aligned} t &= N F_i \left(\frac{1}{k_b} + \frac{1}{k_m} \right) = 16(14.4)(10^3) \left[\frac{1}{5.21(10^6)} + \frac{1}{8.95(10^6)} \right] \\ &= 0.132 \text{ turns} = 47.5^\circ \quad \text{Ans.} \end{aligned}$$

Bolt group is $(1.5)/(5/8) = 2.4$ diameters. Answer is lower than RB&W recommendations.

(b) From Ex. 8-5, $F_i = 14.4$ kip, $k_b = 6.78$ Mlbf/in, and $k_m = 17.4$ Mlbf/in

$T = 0.2(14.4)(10^3)(5/8) = 1800$ lbf · in *Ans.*

$$\begin{aligned} t &= 11(14.4)(10^3) \left[\frac{1}{6.78(10^6)} + \frac{1}{17.4(10^6)} \right] \\ &= 0.0325 = 11.7^\circ \quad \text{Ans.} \quad \text{Again lower than RB\&W.} \end{aligned}$$

8-18 From Eq. (8-22) for the conical frusta, with $d/l = 0.5$

$$\frac{k_m}{Ed} \Big|_{(d/l)=0.5} = \frac{0.5774\pi}{2 \ln \{5[0.5774 + 0.5(0.5)]/[0.5774 + 2.5(0.5)]\}} = 1.11$$

Eq. (8-23), from the Wileman *et al.* finite element study, using the general expression,

$$\frac{k_m}{Ed} \Big|_{(d/l)=0.5} = 0.78952 \exp[0.62914(0.5)] = 1.08$$

8-19 For cast iron, from Table 8-8: $A = 0.77871$, $B = 0.61616$, $E = 14.5$ Mpsi

$$k_m = 14.5(10^6)(0.625)(0.77871) \exp\left(0.61616 \frac{0.625}{1.5}\right) = 9.12(10^6) \text{ lbf/in}$$

This member's spring rate applies to both members. We need k_m for the upper member which represents half of the joint.

$$k_{ci} = 2k_m = 2[9.12(10^6)] = 18.24(10^6) \text{ lbf/in}$$

For steel from Table 8-8: $A = 0.78715$, $B = 0.62873$, $E = 30$ Mpsi

$$k_m = 30(10^6)(0.625)(0.78715) \exp\left(0.62873 \frac{0.625}{1.5}\right) = 19.18(10^6) \text{ lbf/in}$$

$$k_{steel} = 2k_m = 2(19.18)(10^6) = 38.36(10^6) \text{ lbf/in}$$

For springs in series

$$\frac{1}{k_m} = \frac{1}{k_{ci}} + \frac{1}{k_{steel}} = \frac{1}{18.24(10^6)} + \frac{1}{38.36(10^6)}$$

$$k_m = 12.4(10^6) \text{ lbf/in} \quad \text{Ans.}$$

8-20 The external tensile load per bolt is

$$P = \frac{1}{10} \left(\frac{\pi}{4} \right) (150)^2 (6) (10^{-3}) = 10.6 \text{ kN}$$

Also, $l = 40$ mm and from Table A-31, for $d = 12$ mm, $H = 10.8$ mm. No washer is specified.

$$L_T = 2D + 6 = 2(12) + 6 = 30 \text{ mm}$$

$$l + H = 40 + 10.8 = 50.8 \text{ mm}$$

Table A-17:

$$L = 60 \text{ mm}$$

$$l_d = 60 - 30 = 30 \text{ mm}$$

$$l_t = 45 - 30 = 15 \text{ mm}$$

$$A_d = \frac{\pi(12)^2}{4} = 113 \text{ mm}^2$$

Table 8-1:

$$A_t = 84.3 \text{ mm}^2$$

Eq. (8-17):

$$k_b = \frac{113(84.3)(207)}{113(15) + 84.3(30)} = 466.8 \text{ MN/m}$$

Steel: Using Eq. (8-23) for $A = 0.78715$, $B = 0.62873$ and $E = 207$ GPa

Eq. (8-23): $k_m = 207(12)(0.78715) \exp[(0.62873)(12/40)] = 2361 \text{ MN/m}$
 $k_s = 2k_m = 4722 \text{ MN/m}$

Cast iron: $A = 0.77871$, $B = 0.61616$, $E = 100 \text{ GPa}$

$k_m = 100(12)(0.77871) \exp[(0.61616)(12/40)] = 1124 \text{ MN/m}$
 $k_{ci} = 2k_m = 2248 \text{ MN/m}$

$\frac{1}{k_m} = \frac{1}{k_s} + \frac{1}{k_{ci}} \Rightarrow k_m = 1523 \text{ MN/m}$

$C = \frac{466.8}{466.8 + 1523} = 0.2346$

Table 8-1: $A_t = 84.3 \text{ mm}^2$, Table 8-11, $S_p = 600 \text{ MPa}$

Eqs. (8-30) and (8-31): $F_i = 0.75(84.3)(600)(10^{-3}) = 37.9 \text{ kN}$

Eq. (8-28):

$n = \frac{S_p A_t - F_i}{C P} = \frac{600(10^{-3})(84.3) - 37.9}{0.2346(10.6)} = 5.1 \text{ Ans.}$

8-21 Computer programs will vary.

8-22 $D_3 = 150 \text{ mm}$, $A = 100 \text{ mm}$, $B = 200 \text{ mm}$, $C = 300 \text{ mm}$, $D = 20 \text{ mm}$, $E = 25 \text{ mm}$.
 ISO 8.8 bolts: $d = 12 \text{ mm}$, $p = 1.75 \text{ mm}$, coarse pitch of $p = 6 \text{ MPa}$.

$P = \frac{1}{10} \left(\frac{\pi}{4} \right) (150^2)(6)(10^{-3}) = 10.6 \text{ kN/bolt}$

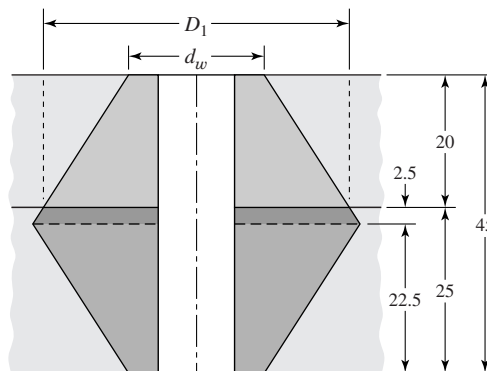
$l = D + E = 20 + 25 = 45 \text{ mm}$

$L_T = 2D + 6 = 2(12) + 6 = 30 \text{ mm}$

Table A-31: $H = 10.8 \text{ mm}$

$l + H = 45 + 10.8 = 55.8 \text{ mm}$

Table A-17: $L = 60 \text{ mm}$



$l_d = 60 - 30 = 30 \text{ mm}$, $l_t = 45 - 30 = 15 \text{ mm}$, $A_d = \pi(12^2/4) = 113 \text{ mm}^2$

Table 8-1: $A_t = 84.3 \text{ mm}^2$

Eq. (8-17):

$$k_b = \frac{113(84.3)(207)}{113(15) + 84.3(30)} = 466.8 \text{ MN/m}$$

There are three frusta: $d_m = 1.5(12) = 18 \text{ mm}$

$$D_1 = (20 \tan 30^\circ)2 + d_w = (20 \tan 30^\circ)2 + 18 = 41.09 \text{ mm}$$

Upper Frustum: $t = 20 \text{ mm}$, $E = 207 \text{ GPa}$, $D = 1.5(12) = 18 \text{ mm}$

Eq. (8-20): $k_1 = 4470 \text{ MN/m}$

Central Frustum: $t = 2.5 \text{ mm}$, $D = 41.09 \text{ mm}$, $E = 100 \text{ GPa}$ (Table A-5) $\Rightarrow k_2 = 52\,230 \text{ MN/m}$

Lower Frustum: $t = 22.5 \text{ mm}$, $E = 100 \text{ GPa}$, $D = 18 \text{ mm}$ $\Rightarrow k_3 = 2074 \text{ MN/m}$

From Eq. (8-18): $k_m = [(1/4470) + (1/52\,230) + (1/2074)]^{-1} = 1379 \text{ MN/m}$

Eq. (e), p. 421: $C = \frac{466.8}{466.8 + 1379} = 0.253$

Eqs. (8-30) and (8-31):

$$F_i = K F_p = K A_t S_p = 0.75(84.3)(600)(10^{-3}) = 37.9 \text{ kN}$$

Eq. (8-28): $n = \frac{S_p A_t - F_i}{C P} = \frac{600(10^{-3})(84.3) - 37.9}{0.253(10.6)} = 4.73 \text{ Ans.}$

8-23 $P = \frac{1}{8} \left(\frac{\pi}{4} \right) (120^2)(6)(10^{-3}) = 8.48 \text{ kN}$

From Fig. 8-21, $t_1 = h = 20 \text{ mm}$ and $t_2 = 25 \text{ mm}$

$$l = 20 + 12/2 = 26 \text{ mm}$$

$$t = 0 \quad (\text{no washer}), \quad L_T = 2(12) + 6 = 30 \text{ mm}$$

$$L > h + 1.5d = 20 + 1.5(12) = 38 \text{ mm}$$

Use 40 mm cap screws.

$$l_d = 40 - 30 = 10 \text{ mm}$$

$$l_t = l - l_d = 26 - 10 = 16 \text{ mm}$$

$$A_d = 113 \text{ mm}^2, \quad A_t = 84.3 \text{ mm}^2$$

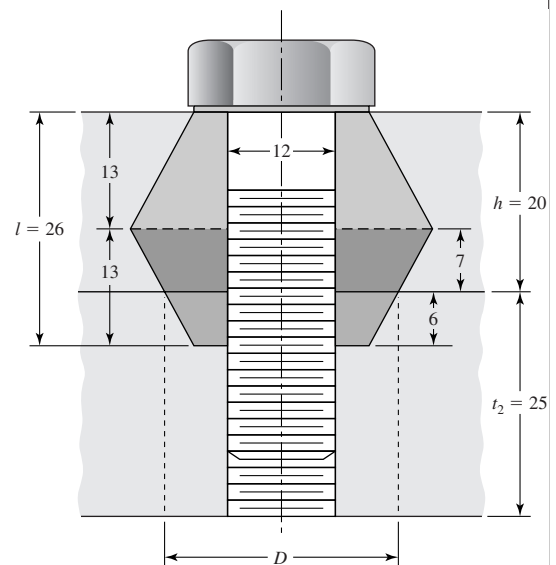
Eq. (8-17):

$$k_b = \frac{113(84.3)(207)}{113(16) + 84.3(10)}$$

$$= 744 \text{ MN/m Ans.}$$

$$d_w = 1.5(12) = 18 \text{ mm}$$

$$D = 18 + 2(6)(\tan 30) = 24.9 \text{ mm}$$



From Eq. (8-20):

Top frustum: $D = 18, t = 13, E = 207 \text{ GPa} \Rightarrow k_1 = 5316 \text{ MN/m}$

Mid-frustum: $t = 7, E = 207 \text{ GPa}, D = 24.9 \text{ mm} \Rightarrow k_2 = 15\,620 \text{ MN/m}$

Bottom frustum: $D = 18, t = 6, E = 100 \text{ GPa} \Rightarrow k_3 = 3887 \text{ MN/m}$

$$k_m = \frac{1}{(1/5316) + (1/15\,620) + (1/3887)} = 2158 \text{ MN/m} \quad \text{Ans.}$$

$$C = \frac{744}{744 + 2158} = 0.256 \quad \text{Ans.}$$

From Prob. 8-22, $F_i = 37.9 \text{ kN}$

$$n = \frac{S_p A_t - F_i}{C P} = \frac{600(0.0843) - 37.9}{0.256(8.48)} = 5.84 \quad \text{Ans.}$$

8-24 Calculation of bolt stiffness:

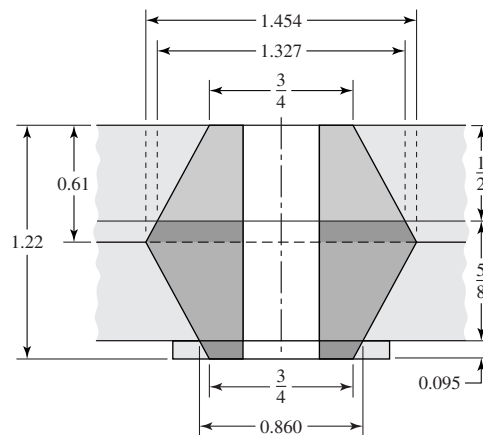
$$H = 7/16 \text{ in}$$

$$L_T = 2(1/2) + 1/4 = 1\,1/4 \text{ in}$$

$$l = 1/2 + 5/8 + 0.095 = 1.22 \text{ in}$$

$$L > 1.125 + 7/16 + 0.095 = 1.66 \text{ in}$$

Use $L = 1.75 \text{ in}$



$$l_d = L - L_T = 1.75 - 1.25 = 0.500 \text{ in}$$

$$l_t = 1.125 + 0.095 - 0.500 = 0.72 \text{ in}$$

$$A_d = \pi(0.50^2)/4 = 0.1963 \text{ in}^2$$

$$A_t = 0.1419 \text{ in}^2 \text{ (UNC)}$$

$$k_t = \frac{A_t E}{l_t} = \frac{0.1419(30)}{0.72} = 5.9125 \text{ Mlbf/in}$$

$$k_d = \frac{A_d E}{l_d} = \frac{0.1963(30)}{0.500} = 11.778 \text{ Mlbf/in}$$

$$k_b = \frac{1}{(1/5.9125) + (1/11.778)} = 3.936 \text{ Mlbf/in} \quad \text{Ans.}$$

Member stiffness for four frusta and joint constant C using Eqs. (8-20) and (e).

Top frustum: $D = 0.75, t = 0.5, d = 0.5, E = 30 \Rightarrow k_1 = 33.30 \text{ Mlbf/in}$

2nd frustum: $D = 1.327, t = 0.11, d = 0.5, E = 14.5 \Rightarrow k_2 = 173.8 \text{ Mlbf/in}$

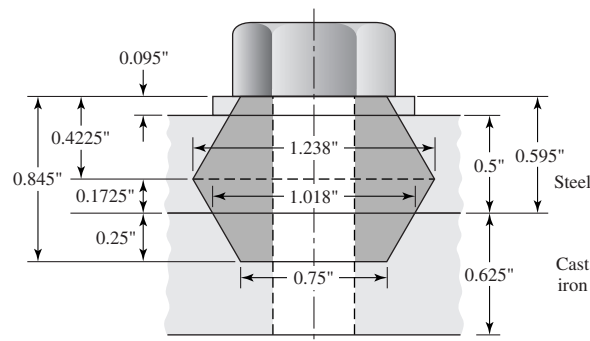
3rd frustum: $D = 0.860, t = 0.515, E = 14.5 \Rightarrow k_3 = 21.47 \text{ Mlbf/in}$

Fourth frustum: $D = 0.75, t = 0.095, d = 0.5, E = 30 \Rightarrow k_4 = 97.27 \text{ Mlbf/in}$

$$k_m = \left(\sum_{i=1}^4 1/k_i \right)^{-1} = 10.79 \text{ Mlbf/in Ans.}$$

$$C = 3.94/(3.94 + 10.79) = 0.267 \text{ Ans.}$$

8-25



$$k_b = \frac{A_t E}{l} = \frac{0.1419(30)}{0.845} = 5.04 \text{ Mlbf/in Ans.}$$

From Fig. 8-21,

$$h = \frac{1}{2} + 0.095 = 0.595 \text{ in}$$

$$l = h + \frac{d}{2} = 0.595 + \frac{0.5}{2} = 0.845$$

$$D_1 = 0.75 + 0.845 \tan 30^\circ = 1.238 \text{ in}$$

$$l/2 = 0.845/2 = 0.4225 \text{ in}$$

From Eq. (8-20):

Frustum 1: $D = 0.75, t = 0.4225 \text{ in}, d = 0.5 \text{ in}, E = 30 \text{ Mpsi} \Rightarrow k_1 = 36.14 \text{ Mlbf/in}$

Frustum 2: $D = 1.018 \text{ in}, t = 0.1725 \text{ in}, E = 70 \text{ Mpsi}, d = 0.5 \text{ in} \Rightarrow k_2 = 134.6 \text{ Mlbf/in}$

Frustum 3: $D = 0.75, t = 0.25 \text{ in}, d = 0.5 \text{ in}, E = 14.5 \text{ Mpsi} \Rightarrow k_3 = 23.49 \text{ Mlbf/in}$

$$k_m = \frac{1}{(1/36.14) + (1/134.6) + (1/23.49)} = 12.87 \text{ Mlbf/in Ans.}$$

$$C = \frac{5.04}{5.04 + 12.87} = 0.281 \text{ Ans.}$$

8-26 Refer to Prob. 8-24 and its solution. Additional information: $A = 3.5$ in, $D_s = 4.25$ in, static pressure 1500 psi, $D_b = 6$ in, C (joint constant) = 0.267, ten SAE grade 5 bolts.

$$P = \frac{1}{10} \frac{\pi(4.25^2)}{4}(1500) = 2128 \text{ lbf}$$

From Tables 8-2 and 8-9,

$$A_t = 0.1419 \text{ in}^2$$

$$S_p = 85\,000 \text{ psi}$$

$$F_i = 0.75(0.1419)(85) = 9.046 \text{ kip}$$

From Eq. (8-28),

$$n = \frac{S_p A_t - F_i}{C P} = \frac{85(0.1419) - 9.046}{0.267(2.128)} = 5.31 \text{ Ans.}$$

8-27 From Fig. 8-21, $t_1 = 0.25$ in

$$h = 0.25 + 0.065 = 0.315 \text{ in}$$

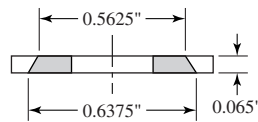
$$l = h + (d/2) = 0.315 + (3/16) = 0.5025 \text{ in}$$

$$D_1 = 1.5(0.375) + 0.577(0.5025) = 0.8524 \text{ in}$$

$$D_2 = 1.5(0.375) = 0.5625 \text{ in}$$

$$l/2 = 0.5025/2 = 0.25125 \text{ in}$$

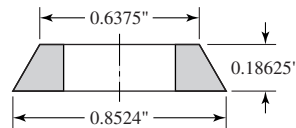
Frustum 1: Washer



$$E = 30 \text{ Mpsi}, \quad t = 0.065 \text{ in}, \quad D = 0.5625 \text{ in}$$

$$k = 78.57 \text{ Mlbf/in} \quad (\text{by computer})$$

Frustum 2: Cap portion

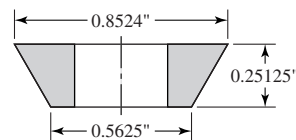


$$E = 14 \text{ Mpsi}, \quad t = 0.18625 \text{ in}$$

$$D = 0.5625 + 2(0.065)(0.577) = 0.6375 \text{ in}$$

$$k = 23.46 \text{ Mlbf/in} \quad (\text{by computer})$$

Frustum 3: Frame and Cap



$$E = 14 \text{ Mpsi}, \quad t = 0.25125 \text{ in}, \quad D = 0.5625 \text{ in}$$

$$k = 14.31 \text{ Mlbf/in} \quad (\text{by computer})$$

$$k_m = \frac{1}{(1/78.57) + (1/23.46) + (1/14.31)} = 7.99 \text{ Mlbf/in} \text{ Ans.}$$

For the bolt, $L_T = 2(3/8) + (1/4) = 1$ in. So the bolt is threaded all the way. Since $A_t = 0.0775 \text{ in}^2$

$$k_b = \frac{0.0775(30)}{0.5025} = 4.63 \text{ Mlbf/in} \quad \text{Ans.}$$

8-28

(a) $F'_b = RF'_{b,\max} \sin \theta$

Half of the external moment is contributed by the line load in the interval $0 \leq \theta \leq \pi$.

$$\frac{M}{2} = \int_0^\pi F'_b R^2 \sin \theta \, d\theta = \int_0^\pi F'_{b,\max} R^2 \sin^2 \theta \, d\theta$$

$$\frac{M}{2} = \frac{\pi}{2} F'_{b,\max} R^2$$

from which $F'_{b,\max} = \frac{M}{\pi R^2}$

$$F_{\max} = \int_{\phi_1}^{\phi_2} F'_b R \sin \theta \, d\theta = \frac{M}{\pi R^2} \int_{\phi_1}^{\phi_2} R \sin \theta \, d\theta = \frac{M}{\pi R} (\cos \phi_1 - \cos \phi_2)$$

Noting $\phi_1 = 75^\circ$, $\phi_2 = 105^\circ$

$$F_{\max} = \frac{12\,000}{\pi(8/2)} (\cos 75^\circ - \cos 105^\circ) = 494 \text{ lbf} \quad \text{Ans.}$$

(b) $F_{\max} = F'_{b,\max} R \Delta\phi = \frac{M}{\pi R^2} (R) \left(\frac{2\pi}{N} \right) = \frac{2M}{RN}$

$$F_{\max} = \frac{2(12\,000)}{(8/2)(12)} = 500 \text{ lbf} \quad \text{Ans.}$$

(c) $F = F_{\max} \sin \theta$

$$M = 2F_{\max} R [(1) \sin^2 90^\circ + 2 \sin^2 60^\circ + 2 \sin^2 30^\circ + (1) \sin^2(0)] = 6F_{\max} R$$

from which

$$F_{\max} = \frac{M}{6R} = \frac{12\,000}{6(8/2)} = 500 \text{ lbf} \quad \text{Ans.}$$

The simple general equation resulted from part (b)

$$F_{\max} = \frac{2M}{RN}$$

8-29 (a) Table 8-11: $S_p = 600 \text{ MPa}$

Eq. (8-30): $F_i = 0.9A_t S_p = 0.9(245)(600)(10^{-3}) = 132.3 \text{ kN}$

Table (8-15): $K = 0.18$

Eq. (8-27) $T = 0.18(132.3)(20) = 476 \text{ N} \cdot \text{m} \quad \text{Ans.}$

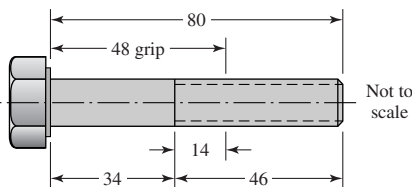
(b) Washers: $t = 3.4 \text{ mm}$, $d = 20 \text{ mm}$, $D = 30 \text{ mm}$, $E = 207 \text{ GPa} \Rightarrow k_1 = 42\,175 \text{ MN/m}$
 Cast iron: $t = 20 \text{ mm}$, $d = 20 \text{ mm}$, $D = 30 + 2(3.4) \tan 30^\circ = 33.93 \text{ mm}$,
 $E = 135 \text{ GPa} \Rightarrow k_2 = 7885 \text{ MN/m}$
 Steel: $t = 20 \text{ mm}$, $d = 20 \text{ mm}$, $D = 33.93 \text{ mm}$, $E = 207 \text{ GPa} \Rightarrow k_3 = 12\,090 \text{ MN/m}$
 $k_m = (2/42\,175 + 1/7885 + 1/12\,090)^{-1} = 3892 \text{ MN/m}$
 Bolt: $l = 46.8 \text{ mm}$. Nut: $H = 18 \text{ mm}$. $L > 46.8 + 18 = 64.8 \text{ mm}$. Use $L = 80 \text{ mm}$.
 $L_T = 2(20) + 6 = 46 \text{ mm}$, $l_d = 80 - 46 = 34 \text{ mm}$, $l_t = 46.8 - 34 = 12.8 \text{ mm}$,
 $A_t = 245 \text{ mm}^2$, $A_d = \pi(20)^2/4 = 314.2 \text{ mm}^2$
 $k_b = \frac{A_d A_t E}{A_d l_t + A_t l_d} = \frac{314.2(245)(207)}{314.2(12.8) + 245(34)} = 1290 \text{ MN/m}$
 $C = 1290/(1290 + 3892) = 0.2489$, $S_p = 600 \text{ MPa}$, $F_i = 132.3 \text{ kN}$
 $n = \frac{S_p A_t - F_i}{C(P/N)} = \frac{600(0.245) - 132.3}{0.2489(15/4)} = 15.7 \text{ Ans.}$
 Bolts are a bit oversized for the load.

8-30 (a) ISO M 20 × 2.5 grade 8.8 coarse pitch bolts, lubricated.

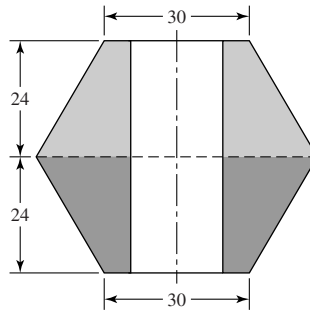
Table 8-2 $A_t = 245 \text{ mm}^2$
 Table 8-11 $S_p = 600 \text{ MPa}$
 $A_d = \pi(20)^2/4 = 314.2 \text{ mm}^2$
 $F_p = 245(0.600) = 147 \text{ kN}$
 $F_i = 0.90F_p = 0.90(147) = 132.3 \text{ kN}$
 $T = 0.18(132.3)(20) = 476 \text{ N} \cdot \text{m} \text{ Ans.}$

(b) $L \geq l + H = 48 + 18 = 66 \text{ mm}$. Therefore, set $L = 80 \text{ mm}$ per Table A-17.

$L_T = 2D + 6 = 2(20) + 6 = 46 \text{ mm}$
 $l_d = L - L_T = 80 - 46 = 34 \text{ mm}$
 $l_t = l - l_d = 48 - 34 = 14 \text{ mm}$



$$k_b = \frac{A_d A_t E}{A_d l_t + A_t l_d} = \frac{314.2(245)(207)}{314.2(14) + 245(34)} = 1251.9 \text{ MN/m}$$



Use Wileman *et al.*

Eq. (8-23)

$$A = 0.78715, \quad B = 0.62873$$

$$\frac{k_m}{Ed} = A \exp\left(\frac{Bd}{LG}\right) = 0.78715 \exp\left[0.62873 \left(\frac{20}{48}\right)\right] = 1.0229$$

$$k_m = 1.0229(207)(20) = 4235 \text{ MN/m}$$

$$C = \frac{1251.9}{1251.9 + 4235} = 0.228$$

Bolts carry 0.228 of the external load; members carry 0.772 of the external load. *Ans.*
Thus, the actual loads are

$$F_b = CP + F_i = 0.228(20) + 132.3 = 136.9 \text{ kN}$$

$$F_m = (1 - C)P - F_i = (1 - 0.228)20 - 132.3 = -116.9 \text{ kN}$$

8-31 Given $p_{\max} = 6 \text{ MPa}$, $p_{\min} = 0$ and from Prob. 8-20 solution, $C = 0.2346$, $F_i = 37.9 \text{ kN}$, $A_t = 84.3 \text{ mm}^2$.

For 6 MPa, $P = 10.6 \text{ kN}$ per bolt

$$\sigma_i = \frac{F_i}{A_t} = \frac{37.9(10^3)}{84.3} = 450 \text{ MPa}$$

Eq. (8-35):

$$\sigma_a = \frac{CP}{2A_t} = \frac{0.2346(10.6)(10^3)}{2(84.3)} = 14.75 \text{ MPa}$$

$$\sigma_m = \sigma_a + \sigma_i = 14.75 + 450 = 464.8 \text{ MPa}$$

(a) Goodman Eq. (8-40) for 8.8 bolts with $S_e = 129 \text{ MPa}$, $S_{ut} = 830 \text{ MPa}$

$$S_a = \frac{S_e(S_{ut} - \sigma_i)}{S_{ut} + S_e} = \frac{129(830 - 450)}{830 + 129} = 51.12 \text{ MPa}$$

$$n_f = \frac{S_a}{\sigma_a} = \frac{51.12}{14.75} = 3.47 \quad \text{Ans.}$$

(b) Gerber Eq. (8-42)

$$S_a = \frac{1}{2S_e} \left[S_{ut} \sqrt{S_{ut}^2 + 4S_e(S_e + \sigma_i)} - S_{ut}^2 - 2\sigma_i S_e \right]$$

$$= \frac{1}{2(129)} \left[830 \sqrt{830^2 + 4(129)(129 + 450)} - 830^2 - 2(450)(129) \right]$$

$$= 76.99 \text{ MPa}$$

$$n_f = \frac{76.99}{14.75} = 5.22 \quad \text{Ans.}$$

(c) ASME-elliptic Eq. (8-43) with $S_p = 600 \text{ MPa}$

$$S_a = \frac{S_e}{S_p^2 + S_e^2} \left(S_p \sqrt{S_p^2 + S_e^2 - \sigma_i^2} - \sigma_i S_e \right)$$

$$= \frac{129}{600^2 + 129^2} \left[600 \sqrt{600^2 + 129^2 - 450^2} - 450(129) \right] = 65.87 \text{ MPa}$$

$$n_f = \frac{65.87}{14.75} = 4.47 \quad \text{Ans.}$$

8-32

$$P = \frac{pA}{N} = \frac{\pi D^2 p}{4N} = \frac{\pi(0.9^2)(550)}{4(36)} = 9.72 \text{ kN/bolt}$$

Table 8-11: $S_p = 830 \text{ MPa}$, $S_{ut} = 1040 \text{ MPa}$, $S_y = 940 \text{ MPa}$

Table 8-1:

$$A_t = 58 \text{ mm}^2$$

$$A_d = \pi(10^2)/4 = 78.5 \text{ mm}^2$$

$$l = D + E = 20 + 25 = 45 \text{ mm}$$

$$L_T = 2(10) + 6 = 26 \text{ mm}$$

Table A-31:

$$H = 8.4 \text{ mm}$$

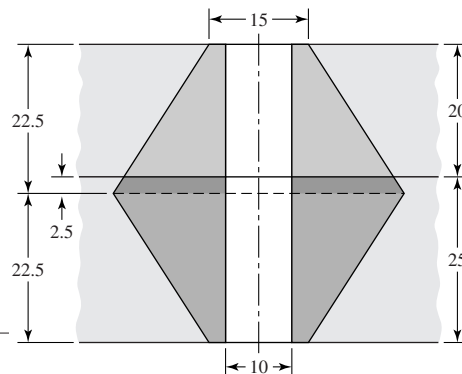
$$L \geq l + H = 45 + 8.4 = 53.4 \text{ mm}$$

Choose $L = 60 \text{ mm}$ from Table A-17

$$l_d = L - L_T = 60 - 26 = 34 \text{ mm}$$

$$l_t = l - l_d = 45 - 34 = 11 \text{ mm}$$

$$k_b = \frac{A_d A_t E}{A_d l_t + A_t l_d} = \frac{78.5(58)(207)}{78.5(11) + 58(34)} = 332.4 \text{ MN/m}$$



Frustum 1: Top, $E = 207$, $t = 20$ mm, $d = 10$ mm, $D = 15$ mm

$$k_1 = \frac{0.5774\pi(207)(10)}{\ln \left\{ \left[\frac{1.155(20) + 15 - 10}{1.155(20) + 15 + 10} \right] \left(\frac{15 + 10}{15 - 10} \right) \right\}}$$

$$= 3503 \text{ MN/m}$$

Frustum 2: Middle, $E = 96$ GPa, $D = 38.09$ mm, $t = 2.5$ mm, $d = 10$ mm

$$k_2 = \frac{0.5774\pi(96)(10)}{\ln \left\{ \left[\frac{1.155(2.5) + 38.09 - 10}{1.155(2.5) + 38.09 + 10} \right] \left(\frac{38.09 + 10}{38.09 - 10} \right) \right\}}$$

$$= 44\,044 \text{ MN/m}$$

could be neglected due to its small influence on k_m .

Frustum 3: Bottom, $E = 96$ GPa, $t = 22.5$ mm, $d = 10$ mm, $D = 15$ mm

$$k_3 = \frac{0.5774\pi(96)(10)}{\ln \left\{ \left[\frac{1.155(22.5) + 15 - 10}{1.155(22.5) + 15 + 10} \right] \left(\frac{15 + 10}{15 - 10} \right) \right\}}$$

$$= 1567 \text{ MN/m}$$

$$k_m = \frac{1}{(1/3503) + (1/44\,044) + (1/1567)} = 1057 \text{ MN/m}$$

$$C = \frac{332.4}{332.4 + 1057} = 0.239$$

$$F_i = 0.75A_t S_p = 0.75(58)(830)(10^{-3}) = 36.1 \text{ kN}$$

Table 8-17: $S_e = 162$ MPa

$$\sigma_i = \frac{F_i}{A_t} = \frac{36.1(10^3)}{58} = 622 \text{ MPa}$$

(a) Goodman Eq. (8-40)

$$S_a = \frac{S_e(S_{ut} - \sigma_i)}{S_{ut} + S_e} = \frac{162(1040 - 622)}{1040 + 162} = 56.34 \text{ MPa}$$

$$n_f = \frac{56.34}{20} = 2.82 \text{ Ans.}$$

(b) Gerber Eq. (8-42)

$$S_a = \frac{1}{2S_e} \left[S_{ut} \sqrt{S_{ut}^2 + 4S_e(S_e + \sigma_i)} - S_{ut}^2 - 2\sigma_i S_e \right]$$

$$= \frac{1}{2(162)} \left[1040 \sqrt{1040^2 + 4(162)(162 + 622)} - 1040^2 - 2(622)(162) \right]$$

$$= 86.8 \text{ MPa}$$

$$\sigma_a = \frac{CP}{2A_t} = \frac{0.239(9.72)(10^3)}{2(58)} = 20 \text{ MPa}$$

$$n_f = \frac{S_a}{\sigma_a} = \frac{86.8}{20} = 4.34 \quad \text{Ans.}$$

(c) ASME elliptic

$$\begin{aligned} S_a &= \frac{S_e}{S_p^2 + S_e^2} \left(S_p \sqrt{S_p^2 + S_e^2 - \sigma_i^2} - \sigma_i S_e \right) \\ &= \frac{162}{830^2 + 162^2} \left[830 \sqrt{830^2 + 162^2 - 622^2} - 622(162) \right] = 84.90 \text{ MPa} \end{aligned}$$

$$n_f = \frac{84.90}{20} = 4.24 \quad \text{Ans.}$$

8-33 Let the repeatedly-applied load be designated as P . From Table A-22, $S_{ut} = 93.7$ kpsi. Referring to the Figure of Prob. 3-74, the following notation will be used for the radii of Section AA.

$$r_i = 1 \text{ in}, \quad r_o = 2 \text{ in}, \quad r_c = 1.5 \text{ in}$$

From Table 4-5, with $R = 0.5$ in

$$r_n = \frac{0.5^2}{2(1.5 - \sqrt{1.5^2 - 0.5^2})} = 1.457107 \text{ in}$$

$$e = r_c - r_n = 1.5 - 1.457107 = 0.042893 \text{ in}$$

$$c_o = r_o - r_n = 2 - 1.457109 = 0.542893 \text{ in}$$

$$c_i = r_n - r_i = 1.457107 - 1 = 0.457107 \text{ in}$$

$$A = \pi(1^2)/4 = 0.7854 \text{ in}^2$$

If P is the maximum load

$$M = Pr_c = 1.5P$$

$$\sigma_i = \frac{P}{A} \left(1 + \frac{r_c c_i}{e r_i} \right) = \frac{P}{0.7854} \left(1 + \frac{1.5(0.457)}{0.0429(1)} \right) = 21.62P$$

$$\sigma_a = \sigma_m = \frac{\sigma_i}{2} = \frac{21.62P}{2} = 10.81P$$

(a) Eye: Section AA

$$k_a = 14.4(93.7)^{-0.718} = 0.553$$

$$d_e = 0.37d = 0.37(1) = 0.37 \text{ in}$$

$$k_b = \left(\frac{0.37}{0.30} \right)^{-0.107} = 0.978$$

$$k_c = 0.85$$

$$S'_e = 0.5(93.7) = 46.85 \text{ kpsi}$$

$$S_e = 0.553(0.978)(0.85)(46.85) = 21.5 \text{ kpsi}$$

Since no stress concentration exists, use a load line slope of 1. From Table 7-10 for Gerber

$$S_a = \frac{93.7^2}{2(21.5)} \left[-1 + \sqrt{1 + \left(\frac{2(21.5)}{93.7} \right)^2} \right] = 20.47 \text{ kpsi}$$

Note the mere 5 percent degrading of S_e in S_a

$$n_f = \frac{S_a}{\sigma_a} = \frac{20.47(10^3)}{10.81P} = \frac{1894}{P}$$

Thread: Die cut. Table 8-17 gives 18.6 kpsi for rolled threads. Use Table 8-16 to find S_e for die cut threads

$$S_e = 18.6(3.0/3.8) = 14.7 \text{ kpsi}$$

Table 8-2:

$$A_t = 0.663 \text{ in}^2$$

$$\sigma = P/A_t = P/0.663 = 1.51P$$

$$\sigma_a = \sigma_m = \sigma/2 = 1.51P/2 = 0.755P$$

From Table 7-10, Gerber

$$S_a = \frac{120^2}{2(14.7)} \left[-1 + \sqrt{1 + \left(\frac{2(14.7)}{120} \right)^2} \right] = 14.5 \text{ kpsi}$$

$$n_f = \frac{S_a}{\sigma_a} = \frac{14\,500}{0.755P} = \frac{19\,200}{P}$$

Comparing $1894/P$ with $19\,200/P$, we conclude that the eye is weaker in fatigue.

Ans.

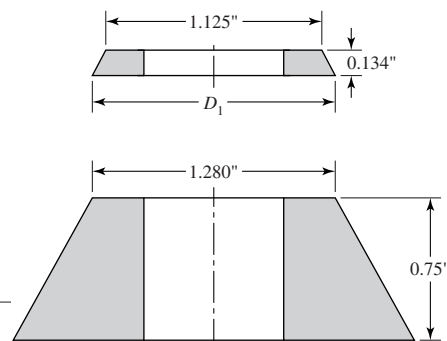
(b) Strengthening steps can include heat treatment, cold forming, cross section change (a round is a poor cross section for a curved bar in bending because the bulk of the material is located where the stress is small). *Ans.*

(c) For $n_f = 2$

$$P = \frac{1894}{2} = 947 \text{ lbf, max. load } \textit{Ans.}$$

8-34 (a) $L \geq 1.5 + 2(0.134) + \frac{41}{64} = 2.41 \text{ in.}$ Use $L = 2\frac{1}{2} \text{ in}$ *Ans.*

(b) Four frusta: Two washers and two members



Washer: $E = 30$ Mpsi, $t = 0.134$ in, $D = 1.125$ in, $d = 0.75$ in

$$\text{Eq. (8-20):} \quad k_1 = 153.3 \text{ Mlbf/in}$$

Member: $E = 16$ Mpsi, $t = 0.75$ in, $D = 1.280$ in, $d = 0.75$ in

$$\text{Eq. (8-20):} \quad k_2 = 35.5 \text{ Mlbf/in}$$

$$k_m = \frac{1}{(2/153.3) + (2/35.5)} = 14.41 \text{ Mlbf/in} \quad \text{Ans.}$$

Bolt:

$$L_T = 2(3/4) + 1/4 = 1\frac{3}{4} \text{ in}$$

$$l = 2(0.134) + 2(0.75) = 1.768 \text{ in}$$

$$l_d = L - L_T = 2.50 - 1.75 = 0.75 \text{ in}$$

$$l_t = l - l_d = 1.768 - 0.75 = 1.018 \text{ in}$$

$$A_t = 0.373 \text{ in}^2 \quad (\text{Table 8-2})$$

$$A_d = \pi(0.75)^2/4 = 0.442 \text{ in}^2$$

$$k_b = \frac{A_d A_t E}{A_d l_t + A_t l_d} = \frac{0.442(0.373)(30)}{0.442(1.018) + 0.373(0.75)} = 6.78 \text{ Mlbf/in} \quad \text{Ans.}$$

$$C = \frac{6.78}{6.78 + 14.41} = 0.320 \quad \text{Ans.}$$

(c) From Eq. (8-40), Goodman with $S_e = 18.6$ kpsi, $S_{ut} = 120$ kpsi

$$S_a = \frac{18.6[120 - (25/0.373)]}{120 + 18.6} = 7.11 \text{ kpsi}$$

The stress components are

$$\sigma_a = \frac{CP}{2A_t} = \frac{0.320(6)}{2(0.373)} = 2.574 \text{ kpsi}$$

$$\sigma_m = \sigma_a + \frac{F_i}{A_t} = 2.574 + \frac{25}{0.373} = 69.6 \text{ kpsi}$$

$$n_f = \frac{S_a}{\sigma_a} = \frac{7.11}{2.574} = 2.76 \quad \text{Ans.}$$

(d) Eq. (8-42) for Gerber

$$S_a = \frac{1}{2(18.6)} \left[120 \sqrt{120^2 + 4(18.6) \left(18.6 + \frac{25}{0.373} \right)} - 120^2 - 2 \left(\frac{25}{0.373} \right) 18.6 \right]$$

$$= 10.78 \text{ kpsi}$$

$$n_f = \frac{10.78}{2.574} = 4.19 \quad \text{Ans.}$$

$$\text{(e) } n_{\text{proof}} = \frac{85}{2.654 + 69.8} = 1.17 \quad \text{Ans.}$$

8-35

(a) Table 8-2: $A_t = 0.1419 \text{ in}^2$
 Table 8-9: $S_p = 85 \text{ kpsi}$, $S_{ut} = 120 \text{ kpsi}$
 Table 8-17: $S_e = 18.6 \text{ kpsi}$
 $F_i = 0.75A_t S_p = 0.75(0.1419)(85) = 9.046 \text{ kip}$

$$C = \frac{4.94}{4.94 + 15.97} = 0.236$$

$$\sigma_a = \frac{CP}{2A_t} = \frac{0.236P}{2(0.1419)} = 0.832P \text{ kpsi}$$

Eq. (8-40) for Goodman criterion

$$S_a = \frac{18.6(120 - 9.046/0.1419)}{120 + 18.6} = 7.55 \text{ kpsi}$$

$$n_f = \frac{S_a}{\sigma_a} = \frac{7.55}{0.832P} = 2 \Rightarrow P = 4.54 \text{ kip} \quad \text{Ans.}$$

(b) Eq. (8-42) for Gerber criterion

$$S_a = \frac{1}{2(18.6)} \left[120 \sqrt{120^2 + 4(18.6) \left(18.6 + \frac{9.046}{0.1419} \right)} - 120^2 - 2 \left(\frac{9.046}{0.1419} \right) 18.6 \right]$$

$$= 11.32 \text{ kpsi}$$

$$n_f = \frac{S_a}{\sigma_a} = \frac{11.32}{0.832P} = 2$$

From which

$$P = \frac{11.32}{2(0.832)} = 6.80 \text{ kip} \quad \text{Ans.}$$

(c) $\sigma_a = 0.832P = 0.832(6.80) = 5.66 \text{ kpsi}$

$$\sigma_m = S_a + \sigma_a = 11.32 + 63.75 = 75.07 \text{ kpsi}$$

Load factor, Eq. (8-28)

$$n = \frac{S_p A_t - F_i}{CP} = \frac{85(0.1419) - 9.046}{0.236(6.80)} = 1.88 \quad \text{Ans.}$$

Separation load factor, Eq. (8-29)

$$n = \frac{F_i}{(1 - C)P} = \frac{9.046}{6.80(1 - 0.236)} = 1.74 \quad \text{Ans.}$$

8-36 Table 8-2: $A_t = 0.969 \text{ in}^2$ (coarse)

$$A_t = 1.073 \text{ in}^2 \text{ (fine)}$$

Table 8-9: $S_p = 74 \text{ kpsi}$, $S_{ut} = 105 \text{ kpsi}$ Table 8-17: $S_e = 16.3 \text{ kpsi}$

Coarse thread, UNC

$$F_i = 0.75(0.969)(74) = 53.78 \text{ kip}$$

$$\sigma_i = \frac{F_i}{A_t} = \frac{53.78}{0.969} = 55.5 \text{ kpsi}$$

$$\sigma_a = \frac{CP}{2A_t} = \frac{0.30P}{2(0.969)} = 0.155P \text{ kpsi}$$

Eq. (8-42):

$$S_a = \frac{1}{2(16.3)} \left[105 \sqrt{105^2 + 4(16.3)(16.3 + 55.5)} - 105^2 - 2(55.5)(16.3) \right] = 9.96 \text{ kpsi}$$

$$n_f = \frac{S_a}{\sigma_a} = \frac{9.96}{0.155P} = 2$$

From which

$$P = \frac{9.96}{0.155(2)} = 32.13 \text{ kip} \quad \text{Ans.}$$

Fine thread, UNF

$$F_i = 0.75(1.073)(74) = 59.55 \text{ kip}$$

$$\sigma_i = \frac{59.55}{1.073} = 55.5 \text{ kpsi}$$

$$\sigma_a = \frac{0.32P}{2(1.073)} = 0.149P \text{ kpsi}$$

$$S_a = 9.96 \quad (\text{as before})$$

$$n_f = \frac{S_a}{\sigma_a} = \frac{9.96}{0.149P} = 2$$

From which

$$P = \frac{9.96}{0.149(2)} = 33.42 \text{ kip} \quad \text{Ans.}$$

Percent improvement

$$\frac{33.42 - 32.13}{32.13}(100) \doteq 4\% \quad \text{Ans.}$$

8-37 For a M30 × 3.5 ISO 8.8 bolt with $P = 80 \text{ kN/bolt}$ and $C = 0.33$

Table 8-1: $A_t = 561 \text{ mm}^2$

Table 8-11: $S_p = 600 \text{ MPa}$

$S_{ut} = 830 \text{ MPa}$

Table 8-17: $S_e = 129 \text{ MPa}$

$$F_i = 0.75(561)(10^{-3})(600) = 252.45 \text{ kN}$$

$$\sigma_i = \frac{252.45(10^{-3})}{561} = 450 \text{ MPa}$$

$$\sigma_a = \frac{CP}{2A_t} = \frac{0.33(80)(10^3)}{2(561)} = 23.53 \text{ MPa}$$

Eq. (8-42):

$$S_a = \frac{1}{2(129)} \left[830\sqrt{830^2 + 4(129)(129 + 450)} - 830^2 - 2(450)(129) \right] = 77.0 \text{ MPa}$$

Fatigue factor of safety

$$n_f = \frac{S_a}{\sigma_a} = \frac{77.0}{23.53} = 3.27 \text{ Ans.}$$

Load factor from Eq. (8-28),

$$n = \frac{S_p A_t - F_i}{CP} = \frac{600(10^{-3})(561) - 252.45}{0.33(80)} = 3.19 \text{ Ans.}$$

Separation load factor from Eq. (8-29),

$$n = \frac{F_i}{(1 - C)P} = \frac{252.45}{(1 - 0.33)(80)} = 4.71 \text{ Ans.}$$

8-38

- (a) Table 8-2: $A_t = 0.0775 \text{ in}^2$
 Table 8-9: $S_p = 85 \text{ kpsi}$, $S_{ut} = 120 \text{ kpsi}$
 Table 8-17: $S_e = 18.6 \text{ kpsi}$

Unthreaded grip

$$k_b = \frac{A_d E}{l} = \frac{\pi(0.375)^2(30)}{4(13.5)} = 0.245 \text{ Mlbf/in per bolt Ans.}$$

$$A_m = \frac{\pi}{4}[(D + 2t)^2 - D^2] = \frac{\pi}{4}(4.75^2 - 4^2) = 5.154 \text{ in}^2$$

$$k_m = \frac{A_m E}{l} = \frac{5.154(30)}{12} \left(\frac{1}{6} \right) = 2.148 \text{ Mlbf/in/bolt. Ans.}$$

- (b) $F_i = 0.75(0.0775)(85) = 4.94 \text{ kip}$
 $\sigma_i = 0.75(85) = 63.75 \text{ kpsi}$
 $P = pA = \frac{2000}{6} \left[\frac{\pi}{4}(4)^2 \right] = 4189 \text{ lbf/bolt}$
 $C = \frac{0.245}{0.245 + 2.148} = 0.102$
 $\sigma_a = \frac{CP}{2A_t} = \frac{0.102(4189)}{2(0.0775)} = 2.77 \text{ kpsi}$

Eq. (8-40) for Goodman

$$S_a = \frac{18.6(120 - 63.75)}{120 + 18.6} = 7.55 \text{ kpsi}$$

$$n_f = \frac{S_a}{\sigma_a} = \frac{7.55}{2.77} = 2.73 \quad \text{Ans.}$$

(c) From Eq. (8-42) for Gerber fatigue criterion,

$$S_a = \frac{1}{2(18.6)} \left[120\sqrt{120^2 + 4(18.6)(18.6 + 63.75)} - 120^2 - 2(63.75)(18.6) \right]$$

$$= 11.32 \text{ kpsi}$$

$$n_f = \frac{S_a}{\sigma_a} = \frac{11.32}{2.77} = 4.09 \quad \text{Ans.}$$

(d) Pressure causing joint separation from Eq. (8-29)

$$n = \frac{F_i}{(1 - C)P} = 1$$

$$P = \frac{F_i}{1 - C} = \frac{4.94}{1 - 0.102} = 5.50 \text{ kip}$$

$$p = \frac{P}{A} = \frac{5500}{\pi(4^2)/4} = 2626 \text{ psi} \quad \text{Ans.}$$

8-39 This analysis is important should the initial bolt tension fail. Members: $S_y = 71 \text{ kpsi}$, $S_{sy} = 0.577(71) = 41.0 \text{ kpsi}$. Bolts: SAE grade 8, $S_y = 130 \text{ kpsi}$, $S_{sy} = 0.577(130) = 75.01 \text{ kpsi}$

Shear in bolts

$$A_s = 2 \left[\frac{\pi(0.375^2)}{4} \right] = 0.221 \text{ in}^2$$

$$F_s = \frac{A_s S_{sy}}{n} = \frac{0.221(75.01)}{3} = 5.53 \text{ kip}$$

Bearing on bolts

$$A_b = 2(0.375)(0.25) = 0.188 \text{ in}^2$$

$$F_b = \frac{A_b S_{yc}}{n} = \frac{0.188(130)}{2} = 12.2 \text{ kip}$$

Bearing on member

$$F_b = \frac{0.188(71)}{2.5} = 5.34 \text{ kip}$$

Tension of members

$$A_t = (1.25 - 0.375)(0.25) = 0.219 \text{ in}^2$$

$$F_t = \frac{0.219(71)}{3} = 5.18 \text{ kip}$$

$$F = \min(5.53, 12.2, 5.34, 5.18) = 5.18 \text{ kip} \quad \text{Ans.}$$

The tension in the members controls the design.

8-40 Members: $S_y = 32$ kpsi

Bolts: $S_y = 92$ kpsi, $S_{sy} = (0.577)92 = 53.08$ kpsi

Shear of bolts

$$A_s = 2 \left[\frac{\pi(0.375)^2}{4} \right] = 0.221 \text{ in}^2$$

$$\tau = \frac{F_s}{A_s} = \frac{4}{0.221} = 18.1 \text{ kpsi}$$

$$n = \frac{S_{sy}}{\tau} = \frac{53.08}{18.1} = 2.93 \quad \text{Ans.}$$

Bearing on bolts

$$A_b = 2(0.25)(0.375) = 0.188 \text{ in}^2$$

$$\sigma_b = \frac{-4}{0.188} = -21.3 \text{ kpsi}$$

$$n = \frac{S_y}{|\sigma_b|} = \frac{92}{|-21.3|} = 4.32 \quad \text{Ans.}$$

Bearing on members

$$n = \frac{S_{yc}}{|\sigma_b|} = \frac{32}{|-21.3|} = 1.50 \quad \text{Ans.}$$

Tension of members

$$A_t = (2.375 - 0.75)(1/4) = 0.406 \text{ in}^2$$

$$\sigma_t = \frac{4}{0.406} = 9.85 \text{ kpsi}$$

$$n = \frac{S_y}{A_t} = \frac{32}{9.85} = 3.25 \quad \text{Ans.}$$

8-41 Members: $S_y = 71$ kpsi

Bolts: $S_y = 92$ kpsi, $S_{sy} = 0.577(92) = 53.08$ kpsi

Shear of bolts

$$F = S_{sy} A / n$$

$$F_s = \frac{53.08(2)(\pi/4)(7/8)^2}{1.8} = 35.46 \text{ kip}$$

Bearing on bolts

$$F_b = \frac{2(7/8)(3/4)(92)}{2.2} = 54.89 \text{ kip}$$

Bearing on members

$$F_b = \frac{2(7/8)(3/4)(71)}{2.4} = 38.83 \text{ kip}$$

Tension in members

$$F_t = \frac{(3 - 0.875)(3/4)(71)}{2.6} = 43.52 \text{ kip}$$

$$F = \min(35.46, 54.89, 38.83, 43.52) = 35.46 \text{ kip} \quad \text{Ans.}$$

8-42 Members: $S_y = 47$ kpsi

Bolts: $S_y = 92$ kpsi, $S_{sy} = 0.577(92) = 53.08$ kpsi

Shear of bolts

$$A_d = \frac{\pi(0.75)^2}{4} = 0.442 \text{ in}^2$$

$$\tau_s = \frac{20}{3(0.442)} = 15.08 \text{ kpsi}$$

$$n = \frac{S_{sy}}{\tau_s} = \frac{53.08}{15.08} = 3.52 \quad \text{Ans.}$$

Bearing on bolt

$$\sigma_b = -\frac{20}{3(3/4)(5/8)} = -14.22 \text{ kpsi}$$

$$n = -\frac{S_y}{\sigma_b} = -\left(\frac{92}{-14.22}\right) = 6.47 \quad \text{Ans.}$$

Bearing on members

$$\sigma_b = -\frac{F}{A_b} = -\frac{20}{3(3/4)(5/8)} = -14.22 \text{ kpsi}$$

$$n = -\frac{S_y}{\sigma_b} = -\frac{47}{-14.22} = 3.31 \quad \text{Ans.}$$

Tension on members

$$\sigma_t = \frac{F}{A} = \frac{20}{(5/8)[7.5 - 3(3/4)]} = 6.10 \text{ kpsi}$$

$$n = \frac{S_y}{\sigma_t} = \frac{47}{6.10} = 7.71 \quad \text{Ans.}$$

8-43 Members: $S_y = 57$ kpsi

Bolts: $S_y = 92$ kpsi, $S_{sy} = 0.577(92) = 53.08$ kpsi

Shear of bolts

$$A_s = 3 \left[\frac{\pi(3/8)^2}{4} \right] = 0.3313 \text{ in}^2$$

$$\tau_s = \frac{F}{A} = \frac{5.4}{0.3313} = 16.3 \text{ kpsi}$$

$$n = \frac{S_{sy}}{\tau_s} = \frac{53.08}{16.3} = 3.26 \quad \text{Ans.}$$

Bearing on bolt

$$A_b = 3 \left(\frac{3}{8} \right) \left(\frac{5}{16} \right) = 0.3516 \text{ in}^2$$

$$\sigma_b = -\frac{F}{A_b} = -\frac{5.4}{0.3516} = -15.36 \text{ kpsi}$$

$$n = -\frac{S_y}{\sigma_b} = -\left(\frac{92}{-15.36} \right) = 5.99 \text{ Ans.}$$

Bearing on members

$$A_b = 0.3516 \text{ in}^2 \text{ (From bearing on bolt calculations)}$$

$$\sigma_b = -15.36 \text{ kpsi (From bearing on bolt calculations)}$$

$$n = -\frac{S_y}{\sigma_b} = -\left(\frac{57}{-15.36} \right) = 3.71 \text{ Ans.}$$

Tension in members

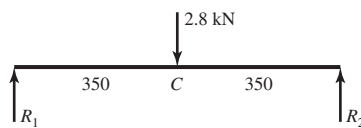
Failure across two bolts

$$A = \frac{5}{16} \left[2 \frac{3}{8} - 2 \left(\frac{3}{8} \right) \right] = 0.5078 \text{ in}^2$$

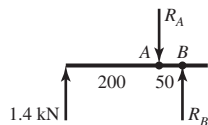
$$\sigma = \frac{F}{A} = \frac{5.4}{0.5078} = 10.63 \text{ kpsi}$$

$$n = \frac{S_y}{\sigma_t} = \frac{57}{10.63} = 5.36 \text{ Ans.}$$

8-44



By symmetry, $R_1 = R_2 = 1.4 \text{ kN}$



$$\sum M_B = 0 \quad 1.4(250) - 50R_A = 0 \quad \Rightarrow \quad R_A = 7 \text{ kN}$$

$$\sum M_A = 0 \quad 200(1.4) - 50R_B = 0 \quad \Rightarrow \quad R_B = 5.6 \text{ kN}$$

Members: $S_y = 370 \text{ MPa}$

Bolts: $S_y = 420 \text{ MPa}$, $S_{sy} = 0.577(420) = 242.3 \text{ MPa}$

Bolt shear:

$$A_s = \frac{\pi}{4} (10^2) = 78.54 \text{ mm}^2$$

$$\tau = \frac{7(10^3)}{78.54} = 89.13 \text{ MPa}$$

$$n = \frac{S_{sy}}{\tau} = \frac{242.3}{89.13} = 2.72$$

Bearing on member:

$$A_b = td = 10(10) = 100 \text{ mm}^2$$

$$\sigma_b = \frac{-7(10^3)}{100} = -70 \text{ MPa}$$

$$n = -\frac{S_y}{\sigma} = \frac{-370}{-70} = 5.29$$

Strength of member

At A, $M = 1.4(200) = 280 \text{ N} \cdot \text{m}$

$$I_A = \frac{1}{12}[10(50^3) - 10(10^3)] = 103.3(10^3) \text{ mm}^4$$

$$\sigma_A = \frac{Mc}{I_A} = \frac{280(25)}{103.3(10^3)}(10^3) = 67.76 \text{ MPa}$$

$$n = \frac{S_y}{\sigma_A} = \frac{370}{67.76} = 5.46$$

At C, $M = 1.4(350) = 490 \text{ N} \cdot \text{m}$

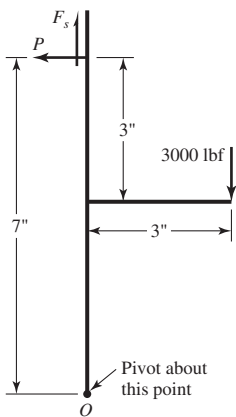
$$I_C = \frac{1}{12}(10)(50^3) = 104.2(10^3) \text{ mm}^4$$

$$\sigma_C = \frac{490(25)}{104.2(10^3)}(10^3) = 117.56 \text{ MPa}$$

$$n = \frac{S_y}{\sigma_C} = \frac{370}{117.56} = 3.15 < 5.46 \quad C \text{ more critical}$$

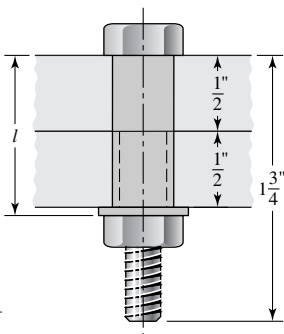
$$n = \min(2.72, 5.29, 3.15) = 2.72 \quad \text{Ans.}$$

8-45



$$F_s = 3000 \text{ lbf}$$

$$P = \frac{3000(3)}{7} = 1286 \text{ lbf}$$



$$H = \frac{7}{16} \text{ in}$$

$$l = \frac{1}{2} + \frac{1}{2} + 0.095 = 1.095 \text{ in}$$

$$L \geq l + H = 1.095 + (7/16) = 1.532 \text{ in}$$

Use $1\frac{3}{4}$ bolts

$$L_T = 2D + \frac{1}{4} = 2(0.5) + 0.25 = 1.25 \text{ in}$$

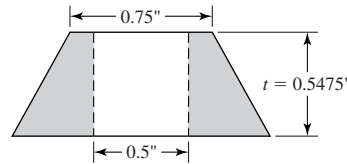
$$l_d = 1.75 - 1.25 = 0.5$$

$$l_t = 1.095 - 0.5 = 0.595$$

$$A_d = \frac{\pi(0.5)^2}{4} = 0.1963 \text{ in}^2$$

$$A_t = 0.1419 \text{ in}$$

$$\begin{aligned} k_b &= \frac{A_d A_t E}{A_d l_t + A_t l_d} \\ &= \frac{0.1963(0.1419)(30)}{0.1963(0.595) + 0.1419(0.5)} \\ &= 4.451 \text{ Mlbf/in} \end{aligned}$$



Two identical frusta

$$A = 0.78715, B = 0.62873$$

$$\begin{aligned} k_m &= EdA \exp\left(0.62873 \frac{d}{L_G}\right) \\ &= 30(0.5)(0.78715) \left[\exp\left(0.62873 \frac{0.5}{1.095}\right) \right] \end{aligned}$$

$$k_m = 15.733 \text{ Mlbf/in}$$

$$C = \frac{4.451}{4.451 + 15.733} = 0.2205$$

$$S_p = 85 \text{ kpsi}$$

$$F_i = 0.75(0.1419)(85) = 9.046 \text{ kip}$$

$$\sigma_i = 0.75(85) = 63.75 \text{ kpsi}$$

$$\sigma_b = \frac{CP + F_i}{A_t} = \frac{0.2205(1.286) + 9.046}{0.1419} = 65.75 \text{ kpsi}$$

$$\tau_s = \frac{F_s}{A_s} = \frac{3}{0.1963} = 15.28 \text{ kpsi}$$

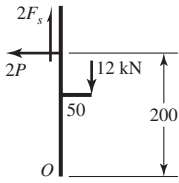
von Mises stress

$$\sigma' = (\sigma_b^2 + 3\tau_s^2)^{1/2} = [65.74^2 + 3(15.28^2)]^{1/2} = 70.87 \text{ kpsi}$$

Stress margin

$$m = S_p - \sigma' = 85 - 70.87 = 14.1 \text{ kpsi} \quad \text{Ans.}$$

8-46



$$2P(200) = 12(50)$$

$$P = \frac{12(50)}{2(200)} = 1.5 \text{ kN per bolt}$$

$$F_s = 6 \text{ kN/bolt}$$

$$S_p = 380 \text{ MPa}$$

$$A_t = 245 \text{ mm}^2, A_d = \frac{\pi}{4}(20^2) = 314.2 \text{ mm}^2$$

$$F_i = 0.75(245)(380)(10^{-3}) = 69.83 \text{ kN}$$

$$\sigma_i = \frac{69.83(10^3)}{245} = 285 \text{ MPa}$$

$$\sigma_b = \frac{CP + F_i}{A_t} = \left(\frac{0.30(1.5) + 69.83}{245} \right) (10^3) = 287 \text{ MPa}$$

$$\tau = \frac{F_s}{A_d} = \frac{6(10^3)}{314.2} = 19.1 \text{ MPa}$$

$$\sigma' = [287^2 + 3(19.1^2)]^{1/2} = 289 \text{ MPa}$$

$$m = S_p - \sigma' = 380 - 289 = 91 \text{ MPa}$$

Thus the bolt will *not* exceed the proof stress. *Ans.*

8-47 Using the result of Prob. 5-31 for lubricated assembly

$$F_x = \frac{2\pi f T}{0.18d}$$

With a design factor of n_d gives

$$T = \frac{0.18n_d F_x d}{2\pi f} = \frac{0.18(3)(1000)d}{2\pi(0.12)} = 716d$$

or $T/d = 716$. Also

$$\begin{aligned} \frac{T}{d} &= K(0.75S_p A_t) \\ &= 0.18(0.75)(85\,000)A_t \\ &= 11\,475A_t \end{aligned}$$

Form a table

Size	A_t	$T/d = 11\,475A_t$	n
$\frac{1}{4} - 28$	0.0364	417.7	1.75
$\frac{5}{16} - 24$	0.058	665.55	2.8
$\frac{3}{8} - 24$	0.0878	1007.5	4.23

The factor of safety in the last column of the table comes from

$$n = \frac{2\pi f(T/d)}{0.18F_x} = \frac{2\pi(0.12)(T/d)}{0.18(1000)} = 0.0042(T/d)$$

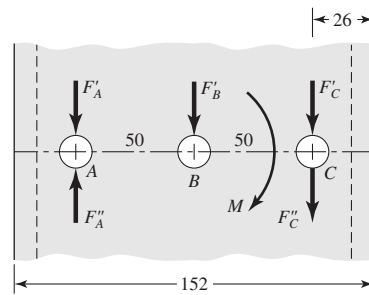
Select a $\frac{3}{8}$ " - 24 UNF capscrew. The setting is given by

$$T = (11\,475A_t)d = 1007.5(0.375) = 378 \text{ lbf} \cdot \text{in}$$

Given the coarse scale on a torque wrench, specify a torque wrench setting of 400 lbf · in. Check the factor of safety

$$n = \frac{2\pi f T}{0.18F_x d} = \frac{2\pi(0.12)(400)}{0.18(1000)(0.375)} = 4.47$$

8-48



Bolts: $S_p = 380 \text{ MPa}$, $S_y = 420 \text{ MPa}$

Channel: $t = 6.4 \text{ mm}$, $S_y = 170 \text{ MPa}$

Cantilever: $S_y = 190 \text{ MPa}$

Nut: $H = 10.8 \text{ mm}$

$$F'_A = F'_B = F'_C = F/3$$

$$M = (50 + 26 + 125)F = 201F$$

$$F''_A = F''_C = \frac{201F}{2(50)} = 2.01F$$

$$F_C = F'_C + F''_C = \left(\frac{1}{3} + 2.01\right)F = 2.343F$$

Bolts:

The shear bolt area is $A = \pi(12^2)/4 = 113.1 \text{ mm}^2$

$$S_{sy} = 0.577(420) = 242.3 \text{ MPa}$$

$$F = \frac{S_{sy}}{n} \left(\frac{A}{2.343}\right) = \frac{242.3(113.1)(10^{-3})}{2.8(2.343)} = 4.18 \text{ kN}$$

Bearing on bolt: For a 12-mm bolt, at the channel,

$$A_b = td = (6.4)(12) = 76.8 \text{ mm}^2$$

$$F = \frac{S_y}{n} \left(\frac{A_b}{2.343}\right) = \frac{420}{2.8} \left[\frac{76.8(10^{-3})}{2.343}\right] = 4.92 \text{ kN}$$

Bearing on channel: $A_b = 76.8 \text{ mm}^2$, $S_y = 170 \text{ MPa}$

$$F = \frac{170}{2.8} \left[\frac{76.8(10^{-3})}{2.343}\right] = 1.99 \text{ kN}$$

Bearing on cantilever:

$$A_b = 12(12) = 144 \text{ mm}^2$$

$$F = \frac{190}{2.8} \left[\frac{(144)(10^{-3})}{2.343} \right] = 4.17 \text{ kN}$$

Bending of cantilever:

$$I = \frac{1}{12}(12)(50^3 - 12^3) = 1.233(10^5) \text{ mm}^4$$

$$\frac{I}{c} = \frac{1.233(10^5)}{25} = 4932$$

$$F = \frac{M}{151} = \frac{4932(190)}{2.8(151)(10^3)} = 2.22 \text{ kN}$$

So $F = 1.99 \text{ kN}$ based on bearing on channel *Ans.*

8-49 $F' = 4 \text{ kN}$; $M = 12(200) = 2400 \text{ N} \cdot \text{m}$

$$F''_A = F''_B = \frac{2400}{64} = 37.5 \text{ kN}$$

$$F_A = F_B = \sqrt{(4)^2 + (37.5)^2} = 37.7 \text{ kN} \quad \text{Ans.}$$

$$F_O = 4 \text{ kN} \quad \text{Ans.}$$

Bolt shear:

$$A_s = \frac{\pi(12)^2}{4} = 113 \text{ mm}^2$$

$$\tau = \frac{37.7(10)^3}{113} = 334 \text{ MPa} \quad \text{Ans.}$$

Bearing on member:

$$A_b = 12(8) = 96 \text{ mm}^2$$

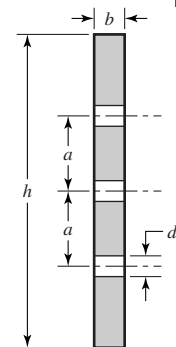
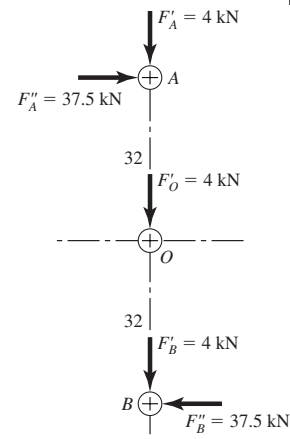
$$\sigma = -\frac{37.7(10)^3}{96} = -393 \text{ MPa} \quad \text{Ans.}$$

Bending stress in plate:

$$\begin{aligned} I &= \frac{bh^3}{12} - \frac{bd^3}{12} - 2 \left(\frac{bd^3}{12} + a^2bd \right) \\ &= \frac{8(136)^3}{12} - \frac{8(12)^3}{12} - 2 \left[\frac{8(12)^3}{12} + (32)^2(8)(12) \right] \\ &= 1.48(10)^6 \text{ mm}^4 \quad \text{Ans.} \end{aligned}$$

$$M = 12(200) = 2400 \text{ N} \cdot \text{m}$$

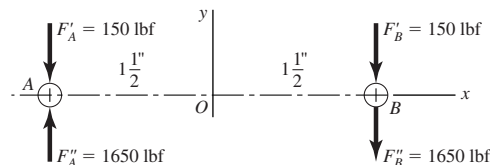
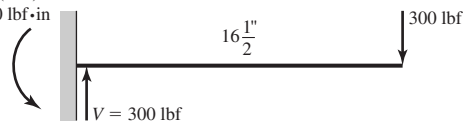
$$\sigma = \frac{Mc}{I} = \frac{2400(68)}{1.48(10)^6}(10)^3 = 110 \text{ MPa} \quad \text{Ans.}$$



8-50

$$M = 16.5(300)$$

$$= 4950 \text{ lbf}\cdot\text{in}$$



Shear of bolt:

$$A_s = \frac{\pi}{4}(0.5)^2 = 0.1963 \text{ in}^2$$

$$\tau = \frac{F}{A} = \frac{1800}{0.1963} = 9170 \text{ psi}$$

$$S_{sy} = 0.577(92) = 53.08 \text{ kpsi}$$

$$n = \frac{53.08}{9.17} = 5.79 \quad \text{Ans.}$$

$$F''_A = F''_B = \frac{4950}{3} = 1650 \text{ lbf}$$

$$F_A = 1500 \text{ lbf}, \quad F_B = 1800 \text{ lbf}$$

Bearing on bolt:

$$A_b = \frac{1}{2} \left(\frac{3}{8} \right) = 0.1875 \text{ in}^2$$

$$\sigma = -\frac{F}{A} = -\frac{1800}{0.1875} = -9600 \text{ psi}$$

$$n = \frac{92}{9.6} = 9.58 \quad \text{Ans.}$$

Bearing on members: $S_y = 54 \text{ kpsi}$, $n = \frac{54}{9.6} = 5.63 \quad \text{Ans.}$

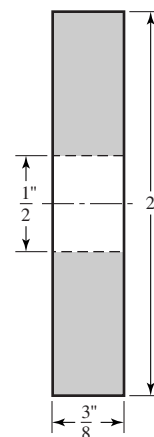
Bending of members: Considering the right-hand bolt

$$M = 300(15) = 4500 \text{ lbf}\cdot\text{in}$$

$$I = \frac{0.375(2)^3}{12} - \frac{0.375(0.5)^3}{12} = 0.246 \text{ in}^4$$

$$\sigma = \frac{Mc}{I} = \frac{4500(1)}{0.246} = 18\,300 \text{ psi}$$

$$n = \frac{54(10)^3}{18\,300} = 2.95 \quad \text{Ans.}$$



8-51 The direct shear load per bolt is $F' = 2500/6 = 417 \text{ lbf}$. The moment is taken only by the four outside bolts. This moment is $M = 2500(5) = 12\,500 \text{ lbf}\cdot\text{in}$.

Thus $F'' = \frac{12\,500}{2(5)} = 1250 \text{ lbf}$ and the resultant bolt load is

$$F = \sqrt{(417)^2 + (1250)^2} = 1318 \text{ lbf}$$

Bolt strength, $S_y = 57 \text{ kpsi}$; Channel strength, $S_y = 46 \text{ kpsi}$; Plate strength, $S_y = 45.5 \text{ kpsi}$

Shear of bolt:

$$A_s = \pi(0.625)^2/4 = 0.3068 \text{ in}^2$$

$$n = \frac{S_{sy}}{\tau} = \frac{(0.577)(57\,000)}{1318/0.3068} = 7.66 \quad \text{Ans.}$$

Bearing on bolt: Channel thickness is $t = 3/16$ in;

$$A_b = (0.625)(3/16) = 0.117 \text{ in}^2; n = \frac{57\,000}{1318/0.117} = 5.07 \text{ Ans.}$$

Bearing on channel: $n = \frac{46\,000}{1318/0.117} = 4.08 \text{ Ans.}$

Bearing on plate: $A_b = 0.625(1/4) = 0.1563 \text{ in}^2$
 $n = \frac{45\,500}{1318/0.1563} = 5.40 \text{ Ans.}$

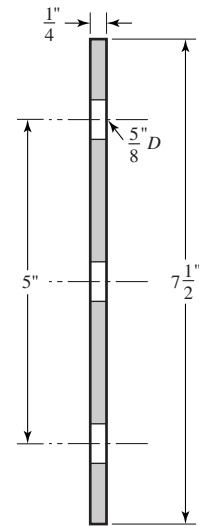
Bending of plate:

$$I = \frac{0.25(7.5)^3}{12} - \frac{0.25(0.625)^3}{12} - 2 \left[\frac{0.25(0.625)^3}{12} + \left(\frac{1}{4}\right) \left(\frac{5}{8}\right) (2.5)^2 \right] = 6.821 \text{ in}^4$$

$$M = 6250 \text{ lbf} \cdot \text{in per plate}$$

$$\sigma = \frac{Mc}{I} = \frac{6250(3.75)}{6.821} = 3436 \text{ psi}$$

$$n = \frac{45\,500}{3436} = 13.2 \text{ Ans.}$$



8-52 Specifying bolts, screws, dowels and rivets is the way a student learns about such components. However, choosing an array a priori is based on experience. Here is a chance for students to build some experience.

8-53 Now that the student can put an a priori decision of an array together with the specification of fasteners.

8-54 A computer program will vary with computer language or software application.

Chapter 9

9-1 Eq. (9-3):

$$F = 0.707hl\tau = 0.707(5/16)(4)(20) = 17.7 \text{ kip } \textit{Ans.}$$

9-2 Table 9-6: $\tau_{\text{all}} = 21.0 \text{ kpsi}$

$$\begin{aligned} f &= 14.85h \text{ kip/in} \\ &= 14.85(5/16) = 4.64 \text{ kip/in} \\ F &= fl = 4.64(4) = 18.56 \text{ kip } \textit{Ans.} \end{aligned}$$

9-3 Table A-20:

1018 HR: $S_{ut} = 58 \text{ kpsi}$, $S_y = 32 \text{ kpsi}$

1018 CR: $S_{ut} = 64 \text{ kpsi}$, $S_y = 54 \text{ kpsi}$

Cold-rolled properties degrade to hot-rolled properties in the neighborhood of the weld.

Table 9-4:

$$\begin{aligned} \tau_{\text{all}} &= \min(0.30S_{ut}, 0.40S_y) \\ &= \min[0.30(58), 0.40(32)] \\ &= \min(17.4, 12.8) = 12.8 \text{ kpsi} \end{aligned}$$

for both materials.

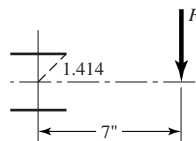
Eq. (9-3):

$$\begin{aligned} F &= 0.707hl\tau_{\text{all}} \\ F &= 0.707(5/16)(4)(12.8) = 11.3 \text{ kip } \textit{Ans.} \end{aligned}$$

9-4 Eq. (9-3)

$$\tau = \frac{\sqrt{2}F}{hl} = \frac{\sqrt{2}(32)}{(5/16)(4)(2)} = 18.1 \text{ kpsi } \textit{Ans.}$$

9-5 $b = d = 2 \text{ in}$



(a) *Primary shear* Table 9-1

$$\tau'_y = \frac{V}{A} = \frac{F}{1.414(5/16)(2)} = 1.13F \text{ kpsi}$$

Secondary shear Table 9-1

$$J_u = \frac{d(3b^2 + d^2)}{6} = \frac{2[(3)(2^2) + 2^2]}{6} = 5.333 \text{ in}^3$$

$$J = 0.707hJ_u = 0.707(5/16)(5.333) = 1.18 \text{ in}^4$$

$$\tau_x'' = \tau_y'' = \frac{Mr_y}{J} = \frac{7F(1)}{1.18} = 5.93F \text{ kpsi}$$

Maximum shear

$$\tau_{\max} = \sqrt{\tau_x''^2 + (\tau_y' + \tau_y'')^2} = F\sqrt{5.93^2 + (1.13 + 5.93)^2} = 9.22F \text{ kpsi}$$

$$F = \frac{\tau_{\text{all}}}{9.22} = \frac{20}{9.22} = 2.17 \text{ kip} \quad \text{Ans.} \quad (1)$$

(b) For E7010 from Table 9-6, $\tau_{\text{all}} = 21 \text{ kpsi}$

Table A-20:

HR 1020 Bar: $S_{ut} = 55 \text{ kpsi}, S_y = 30 \text{ kpsi}$

HR 1015 Support: $S_{ut} = 50 \text{ kpsi}, S_y = 27.5 \text{ kpsi}$

Table 9-5, E7010 Electrode: $S_{ut} = 70 \text{ kpsi}, S_y = 57 \text{ kpsi}$

The support controls the design.

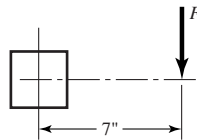
Table 9-4:

$$\tau_{\text{all}} = \min[0.30(50), 0.40(27.5)] = \min[15, 11] = 11 \text{ kpsi}$$

The allowable load from Eq. (1) is

$$F = \frac{\tau_{\text{all}}}{9.22} = \frac{11}{9.22} = 1.19 \text{ kip} \quad \text{Ans.}$$

9-6 $b = d = 2 \text{ in}$



Primary shear

$$\tau_y' = \frac{V}{A} = \frac{F}{1.414(5/16)(2 + 2)} = 0.566F$$

Secondary shear

Table 9-1: $J_u = \frac{(b + d)^3}{6} = \frac{(2 + 2)^3}{6} = 10.67 \text{ in}^3$

$$J = 0.707hJ_u = 0.707(5/16)(10.67) = 2.36 \text{ in}^4$$

$$\tau_x'' = \tau_y'' = \frac{Mr_y}{J} = \frac{(7F)(1)}{2.36} = 2.97F$$

Maximum shear

$$\tau_{\max} = \sqrt{\tau_x''^2 + (\tau_y' + \tau_y'')^2} = F\sqrt{2.97^2 + (0.556 + 2.97)^2} = 4.61F \text{ kpsi}$$

$$F = \frac{\tau_{\text{all}}}{4.61} \quad \text{Ans.}$$

which is twice $\tau_{\max}/9.22$ of Prob. 9-5.

9-7 Weldment, subjected to alternating fatigue, has throat area of

$$A = 0.707(6)(60 + 50 + 60) = 721 \text{ mm}^2$$

Members' endurance limit: AISI 1010 steel

$$S_{ut} = 320 \text{ MPa}, \quad S_e' = 0.5(320) = 160 \text{ MPa}$$

$$k_a = 272(320)^{-0.995} = 0.875$$

$$k_b = 1 \quad (\text{direct shear})$$

$$k_c = 0.59 \quad (\text{shear})$$

$$k_d = 1$$

$$k_f = \frac{1}{K_{fs}} = \frac{1}{2.7} = 0.370$$

$$S_{se} = 0.875(1)(0.59)(0.37)(160) = 30.56 \text{ MPa}$$

Electrode's endurance: 6010

$$S_{ut} = 62(6.89) = 427 \text{ MPa}$$

$$S_e' = 0.5(427) = 213.5 \text{ MPa}$$

$$k_a = 272(427)^{-0.995} = 0.657$$

$$k_b = 1 \quad (\text{direct shear})$$

$$k_c = 0.59 \quad (\text{shear})$$

$$k_d = 1$$

$$k_f = 1/K_{fs} = 1/2.7 = 0.370$$







$$S_{se} = 0.657(1)(0.59)(0.37)(213.5) = 30.62 \text{ MPa} \doteq 30.56$$

Thus, the members and the electrode are of equal strength. For a factor of safety of 1,

$$F_a = \tau_a A = 30.6(721)(10^{-3}) = 22.1 \text{ kN} \quad \text{Ans.}$$

9-8 Primary shear $\tau' = 0$ (why?)
 Secondary shear
 Table 9-1: $J_u = 2\pi r^3 = 2\pi(4)^3 = 402 \text{ cm}^3$
 $J = 0.707hJ_u = 0.707(0.5)(402) = 142 \text{ cm}^4$
 $M = 200F \text{ N} \cdot \text{m}$ (F in kN)
 $\tau'' = \frac{Mr}{2J} = \frac{(200F)(4)}{2(142)} = 2.82F$ (2 welds)
 $F = \frac{\tau_{\text{all}}}{\tau''} = \frac{140}{2.82} = 49.2 \text{ kN}$ Ans.




9-9 Rank

	$\text{fom}' = \frac{J_u}{lh} = \frac{a^3/12}{ah} = \frac{a^2}{12h} = 0.0833 \left(\frac{a^2}{h} \right)$	⑤
	$\text{fom}' = \frac{a(3a^2 + a^2)}{6(2a)h} = \frac{a^2}{3h} = 0.3333 \left(\frac{a^2}{h} \right)$	①
	$\text{fom}' = \frac{(2a)^4 - 6a^2a^2}{12(a+a)2ah} = \frac{5a^2}{24h} = 0.2083 \left(\frac{a^2}{h} \right)$	④
	$\text{fom}' = \frac{1}{3ah} \left[\frac{8a^3 + 6a^3 + a^3}{12} - \frac{a^4}{2a+a} \right] = \frac{11a^2}{36h} = 0.3056 \left(\frac{a^2}{h} \right)$	②
	$\text{fom}' = \frac{(2a)^3}{6h} \frac{1}{4a} = \frac{8a^3}{24ah} = \frac{a^2}{3h} = 0.3333 \left(\frac{a^2}{h} \right)$	①
	$\text{fom}' = \frac{2\pi(a/2)^3}{\pi ah} = \frac{a^3}{4ah} = \frac{a^2}{4h} = 0.25 \left(\frac{a^2}{h} \right)$	③

These rankings apply to fillet weld patterns in torsion that have a square area $a \times a$ in which to place weld metal. The object is to place as much metal as possible to the border. If your area is rectangular, your goal is the same but the rankings may change.

Students will be surprised that the circular weld bead does not rank first.

9-10

	$\text{fom}' = \frac{I_u}{lh} = \frac{1}{a} \left(\frac{a^3}{12} \right) \left(\frac{1}{h} \right) = \frac{1}{12} \left(\frac{a^2}{h} \right) = 0.0833 \left(\frac{a^2}{h} \right)$	⑤
	$\text{fom}' = \frac{I_u}{lh} = \frac{1}{2ah} \left(\frac{a^3}{6} \right) = 0.0833 \left(\frac{a^2}{h} \right)$	⑤
	$\text{fom}' = \frac{I_u}{lh} = \frac{1}{2ah} \left(\frac{a^2}{2} \right) = \frac{1}{4} \left(\frac{a^2}{h} \right) = 0.25 \left(\frac{a^2}{h} \right)$	①

$$\square \quad \text{fom}' = \frac{I_u}{lh} = \frac{1}{[2(2a)]h} \left(\frac{a^2}{6}\right) (3a + a) = \frac{1}{6} \left(\frac{a^2}{h}\right) = 0.1667 \left(\frac{a^2}{h}\right) \quad (2)$$

$$\square \quad \bar{x} = \frac{b}{2} = \frac{a}{2}, \quad \bar{y} = \frac{d^2}{b + 2d} = \frac{a^2}{3a} = \frac{a}{3}$$

$$I_u = \frac{2d^3}{3} - 2d^2 \left(\frac{a}{3}\right) + (b + 2d) \left(\frac{a^2}{9}\right) = \frac{2a^3}{3} - \frac{2a^3}{3} + 3a \left(\frac{a^2}{9}\right) = \frac{a^3}{3}$$

$$\text{fom}' = \frac{I_u}{lh} = \frac{a^3/3}{3ah} = \frac{1}{9} \left(\frac{a^2}{h}\right) = 0.1111 \left(\frac{a^2}{h}\right) \quad (4)$$

$$\circ \quad I_u = \pi r^3 = \frac{\pi a^3}{8}$$

$$\text{fom}' = \frac{I_u}{lh} = \frac{\pi a^3/8}{\pi ah} = \frac{a^2}{8h} = 0.125 \left(\frac{a^2}{h}\right) \quad (3)$$

The CEE-section pattern was not ranked because the deflection of the beam is out-of-plane. If you have a square area in which to place a fillet weldment pattern under bending, your objective is to place as much material as possible away from the x -axis. If your area is rectangular, your goal is the same, but the rankings may change.

9-11 Materials:

Attachment (1018 HR) $S_y = 32$ kpsi, $S_{ut} = 58$ kpsi

Member (A36) $S_y = 36$ kpsi, S_{ut} ranges from 58 to 80 kpsi, use 58.

The member and attachment are weak compared to the E60XX electrode.

Decision Specify E6010 electrode

Controlling property: $\tau_{\text{all}} = \min[0.3(58), 0.4(32)] = \min(16.6, 12.8) = 12.8$ kpsi

For a static load the parallel and transverse fillets are the same. If n is the number of beads,

$$\tau = \frac{F}{n(0.707)hl} = \tau_{\text{all}}$$

$$nh = \frac{F}{0.707l\tau_{\text{all}}} = \frac{25}{0.707(3)(12.8)} = 0.921$$

Make a table.

Number of beads n	Leg size h
1	0.921
2	0.460 \rightarrow 1/2"
3	0.307 \rightarrow 5/16"
4	0.230 \rightarrow 1/4"

Decision: Specify 1/4" leg size

Decision: Weld all-around

Weldment Specifications:

- Pattern: All-around square
- Electrode: E6010
- Type: Two parallel fillets *Ans.*
 Two transverse fillets
- Length of bead: 12 in
- Leg: 1/4 in

For a figure of merit of, in terms of weldbead volume, is this design optimal?

9-12 *Decision:* Choose a parallel fillet weldment pattern. By so-doing, we've chosen an optimal pattern (see Prob. 9-9) and have thus reduced a synthesis problem to an analysis problem:

Table 9-1: $A = 1.414hd = 1.414(h)(3) = 4.24h \text{ in}^3$

Primary shear

$$\tau'_y = \frac{V}{A} = \frac{3000}{4.24h} = \frac{707}{h}$$

Secondary shear

Table 9-1: $J_u = \frac{d(3b^2 + d^2)}{6} = \frac{3[3(3^2) + 3^2]}{6} = 18 \text{ in}^3$

$$J = 0.707(h)(18) = 12.7h \text{ in}^4$$

$$\tau''_x = \frac{Mr_y}{J} = \frac{3000(7.5)(1.5)}{12.7h} = \frac{2657}{h} = \tau''_y$$

$$\tau_{\max} = \sqrt{\tau_x''^2 + (\tau'_y + \tau_y'')^2} = \frac{1}{h} \sqrt{2657^2 + (707 + 2657)^2} = \frac{4287}{h}$$

Attachment (1018 HR): $S_y = 32 \text{ kpsi}$, $S_{ut} = 58 \text{ kpsi}$

Member (A36): $S_y = 36 \text{ kpsi}$

The attachment is weaker

Decision: Use E60XX electrode

$$\tau_{\text{all}} = \min[0.3(58), 0.4(32)] = 12.8 \text{ kpsi}$$

$$\tau_{\max} = \tau_{\text{all}} = \frac{4287}{h} = 12\,800 \text{ psi}$$

$$h = \frac{4287}{12\,800} = 0.335 \text{ in}$$

Decision: Specify 3/8" leg size

Weldment Specifications:

- Pattern: Parallel fillet welds
- Electrode: E6010
- Type: Fillet *Ans.*
- Length of bead: 6 in
- Leg size: 3/8 in

9-13 An optimal square space ($3'' \times 3''$) weldment pattern is \parallel or \sqsubset or \square . In Prob. 9-12, there was roundup of leg size to $3/8$ in. Consider the member material to be structural A36 steel.

Decision: Use a parallel horizontal weld bead pattern for welding optimization and convenience.

Materials:

Attachment (1018 HR): $S_y = 32$ kpsi, $S_{ut} = 58$ kpsi

Member (A36): $S_y = 36$ kpsi, S_{ut} 58–80 kpsi; use 58 kpsi

From Table 9-4 AISC welding code,

$$\tau_{\text{all}} = \min[0.3(58), 0.4(32)] = \min(16.6, 12.8) = 12.8 \text{ kpsi}$$

Select a stronger electrode material from Table 9-3.

Decision: Specify E6010

Throat area and other properties:

$$A = 1.414hd = 1.414(h)(3) = 4.24h \text{ in}^2$$

$$\bar{x} = b/2 = 3/2 = 1.5 \text{ in}$$

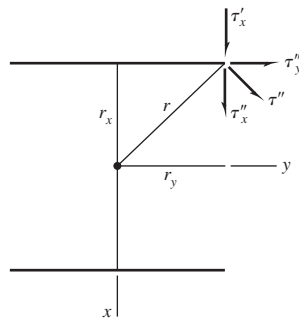
$$\bar{y} = d/2 = 3/2 = 1.5 \text{ in}$$

$$J_u = \frac{d(3b^2 + d^2)}{6} = \frac{3[3(3^2) + 3^2]}{6} = 18 \text{ in}^3$$

$$J = 0.707hJ_u = 0.707(h)(18) = 12.73h \text{ in}^4$$

Primary shear:

$$\tau'_x = \frac{V}{A} = \frac{3000}{4.24h} = \frac{707.5}{h}$$



Secondary shear:

$$\tau'' = \frac{Mr}{J}$$

$$\tau''_x = \tau'' \cos 45^\circ = \frac{Mr}{J} \cos 45^\circ = \frac{Mr_x}{J}$$

$$\tau''_x = \frac{3000(6 + 1.5)(1.5)}{12.73h} = \frac{2651}{h}$$

$$\tau''_y = \tau''_x = \frac{2651}{h}$$

$$\begin{aligned}\tau_{\max} &= \sqrt{(\tau_x'' + \tau_x')^2 + \tau_y''^2} \\ &= \frac{1}{h} \sqrt{(2651 + 707.5)^2 + 2651^2} \\ &= \frac{4279}{h} \text{ psi}\end{aligned}$$

Relate stress and strength:

$$\begin{aligned}\tau_{\max} &= \tau_{\text{all}} \\ \frac{4279}{h} &= 12\,800 \\ h &= \frac{4279}{12\,800} = 0.334 \text{ in} \rightarrow 3/8 \text{ in}\end{aligned}$$

Weldment Specifications:

Pattern: Horizontal parallel weld tracks
 Electrode: E6010
 Type of weld: Two parallel fillet welds
 Length of bead: 6 in
 Leg size: 3/8 in

Additional thoughts:

Since the round-up in leg size was substantial, why not investigate a backward C □ weld pattern. One might then expect shorter horizontal weld beads which will have the advantage of allowing a shorter member (assuming the member has not yet been designed). This will show the inter-relationship between attachment design and supporting members.

9-14 Materials:

Member (A36): $S_y = 36$ kpsi, $S_{ut} = 58$ to 80 kpsi; use $S_{ut} = 58$ kpsi

Attachment (1018 HR): $S_y = 32$ kpsi, $S_{ut} = 58$ kpsi

$$\tau_{\text{all}} = \min[0.3(58), 0.4(32)] = 12.8 \text{ kpsi}$$

Decision: Use E6010 electrode. From Table 9-3: $S_y = 50$ kpsi, $S_{ut} = 62$ kpsi,

$$\tau_{\text{all}} = \min[0.3(62), 0.4(50)] = 20 \text{ kpsi}$$

Decision: Since A36 and 1018 HR are weld metals to an unknown extent, use

$$\tau_{\text{all}} = 12.8 \text{ kpsi}$$

Decision: Use the most efficient weld pattern—square, weld-all-around. Choose 6" × 6" size.

Attachment length:

$$l_1 = 6 + a = 6 + 6.25 = 12.25 \text{ in}$$

Throat area and other properties:

$$A = 1.414h(b + d) = 1.414(h)(6 + 6) = 17.0h$$

$$\bar{x} = \frac{b}{2} = \frac{6}{2} = 3 \text{ in}, \quad \bar{y} = \frac{d}{2} = \frac{6}{2} = 3 \text{ in}$$

Primary shear

$$\tau'_y = \frac{V}{A} = \frac{F}{A} = \frac{20\,000}{17h} = \frac{1176}{h} \text{ psi}$$

Secondary shear

$$J_u = \frac{(b+d)^3}{6} = \frac{(6+6)^3}{6} = 288 \text{ in}^3$$

$$J = 0.707h(288) = 203.6h \text{ in}^4$$

$$\tau''_x = \tau''_y = \frac{Mr_y}{J} = \frac{20\,000(6.25+3)(3)}{203.6h} = \frac{2726}{h} \text{ psi}$$

$$\tau_{\max} = \sqrt{\tau_x''^2 + (\tau_y'' + \tau_y')^2} = \frac{1}{h} \sqrt{2726^2 + (2726 + 1176)^2} = \frac{4760}{h} \text{ psi}$$

Relate stress to strength

$$\tau_{\max} = \tau_{\text{all}}$$

$$\frac{4760}{h} = 12\,800$$

$$h = \frac{4760}{12\,800} = 0.372 \text{ in}$$

Decision:

Specify 3/8 in leg size

Specifications:

Pattern: All-around square weld bead track

Electrode: E6010

Type of weld: Fillet

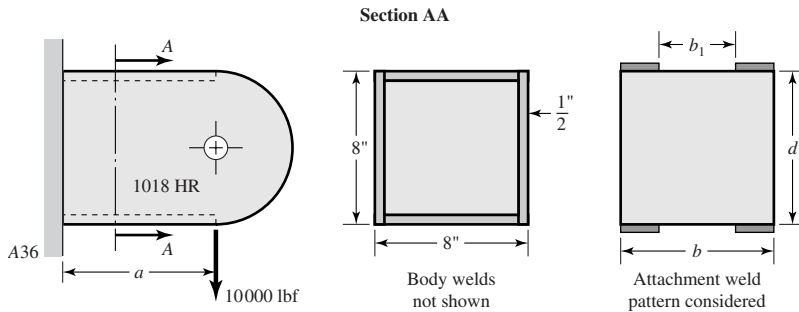
Weld bead length: 24 in

Leg size: 3/8 in

Attachment length: 12.25 in

- 9-15** This is a good analysis task to test the students' understanding
- (1) Solicit information related to a priori decisions.
 - (2) Solicit design variables b and d .
 - (3) Find h and round and output all parameters on a single screen. Allow return to Step 1 or Step 2.
 - (4) When the iteration is complete, the final display can be the bulk of your adequacy assessment.
- Such a program can teach too.
- 9-16** The objective of this design task is to have the students teach themselves that the weld patterns of Table 9-3 can be added or subtracted to obtain the properties of a contemplated weld pattern. The instructor can control the level of complication. I have left the

presentation of the drawing to you. Here is one possibility. Study the problem's opportunities, then present this (or your sketch) with the problem assignment.



Use b_1 as the design variable. Express properties as a function of b_1 . From Table 9-3, category 3:

$$A = 1.414h(b - b_1)$$

$$\bar{x} = b/2, \quad \bar{y} = d/2$$

$$I_u = \frac{bd^2}{2} - \frac{b_1d^2}{2} = \frac{(b - b_1)d^2}{2}$$

$$I = 0.707hI_u$$

$$\tau' = \frac{V}{A} = \frac{F}{1.414h(b - b_1)}$$

$$\tau'' = \frac{Mc}{I} = \frac{Fa(d/2)}{0.707hI_u}$$

$$\tau_{\max} = \sqrt{\tau'^2 + \tau''^2}$$

Parametric study

Let $a = 10$ in, $b = 8$ in, $d = 8$ in, $b_1 = 2$ in, $\tau_{\text{all}} = 12.8$ kpsi, $l = 2(8 - 2) = 12$ in

$$A = 1.414h(8 - 2) = 8.48h \text{ in}^2$$

$$I_u = (8 - 2)(8^2/2) = 192 \text{ in}^3$$

$$I = 0.707(h)(192) = 135.7h \text{ in}^4$$

$$\tau' = \frac{10000}{8.48h} = \frac{1179}{h} \text{ psi}$$

$$\tau'' = \frac{10000(10)(8/2)}{135.7h} = \frac{2948}{h} \text{ psi}$$

$$\tau_{\max} = \frac{1}{h} \sqrt{1179^2 + 2948^2} = \frac{3175}{h} = 12800$$

from which $h = 0.248$ in. Do not round off the leg size – something to learn.

$$\text{fom}' = \frac{I_u}{hl} = \frac{192}{0.248(12)} = 64.5$$

$$A = 8.48(0.248) = 2.10 \text{ in}^2$$

$$I = 135.7(0.248) = 33.65 \text{ in}^4$$

$$\text{vol} = \frac{h^2}{2}l = \frac{0.248^2}{2}12 = 0.369 \text{ in}^3$$

$$\frac{I}{\text{vol}} = \frac{33.65}{0.369} = 91.2 = \text{eff}$$

$$\tau' = \frac{1179}{0.248} = 4754 \text{ psi}$$

$$\tau'' = \frac{2948}{0.248} = 11\,887 \text{ psi}$$

$$\tau_{\max} = \frac{4127}{0.248} \doteq 12\,800 \text{ psi}$$

Now consider the case of uninterrupted welds,

$$b_1 = 0$$

$$A = 1.414(h)(8 - 0) = 11.31h$$

$$I_u = (8 - 0)(8^2/2) = 256 \text{ in}^3$$

$$I = 0.707(256)h = 181h \text{ in}^4$$

$$\tau' = \frac{10\,000}{11.31h} = \frac{884}{h}$$

$$\tau'' = \frac{10\,000(10)(8/2)}{181h} = \frac{2210}{h}$$

$$\tau_{\max} = \frac{1}{h}\sqrt{884^2 + 2210^2} = \frac{2380}{h} = \tau_{\text{all}}$$

$$h = \frac{\tau_{\max}}{\tau_{\text{all}}} = \frac{2380}{12\,800} = 0.186 \text{ in}$$

Do not round off h .

$$A = 11.31(0.186) = 2.10 \text{ in}^2$$

$$I = 181(0.186) = 33.67$$

$$\tau' = \frac{884}{0.186} = 4753 \text{ psi}, \quad \text{vol} = \frac{0.186^2}{2}16 = 0.277 \text{ in}^3$$

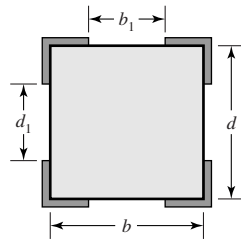
$$\tau'' = \frac{2210}{0.186} = 11\,882 \text{ psi}$$

$$\text{fom}' = \frac{I_u}{hl} = \frac{256}{0.186(16)} = 86.0$$

$$\text{eff} = \frac{I}{(h^2/2)l} = \frac{33.67}{(0.186^2/2)16} = 121.7$$

Conclusions: To meet allowable stress limitations, I and A do not change, nor do τ and σ . To meet the shortened bead length, h is increased proportionately. However, volume of bead laid down increases as h^2 . The uninterrupted bead is superior. In this example, we did not round h and as a result we learned something. Our measures of merit are also sensitive to rounding. When the design decision is made, rounding to the next larger standard weld fillet size will decrease the merit.

Had the weld bead gone around the corners, the situation would change. Here is a followup task analyzing an alternative weld pattern.



9-17 From Table 9-2

For the box $A = 1.414h(b + d)$

Subtracting b_1 from b and d_1 from d

$$A = 1.414h(b - b_1 + d - d_1)$$

$$I_u = \frac{d^2}{6}(3b + d) - \frac{d_1^3}{6} - \frac{b_1 d^2}{2}$$

$$= \frac{1}{2}(b - b_1)d^2 + \frac{1}{6}(d^3 - d_1^3)$$

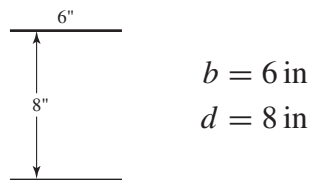
length of bead $l = 2(b - b_1 + d - d_1)$

fom = I_u/hl

9-18 Computer programs will vary.

9-19 $\tau_{all} = 12\,800$ psi. Use Fig. 9-17(a) for general geometry, but employ \square beads and then \parallel beads.

Horizontal parallel weld bead pattern



From Table 9-2, category 3

$$A = 1.414hb = 1.414(h)(6) = 8.48h \text{ in}^2$$

$$\bar{x} = b/2 = 6/2 = 3 \text{ in}, \quad \bar{y} = d/2 = 8/2 = 4 \text{ in}$$

$$I_u = \frac{bd^2}{2} = \frac{6(8)^2}{2} = 192 \text{ in}^3$$

$$I = 0.707hI_u = 0.707(h)(192) = 135.7h \text{ in}^4$$

$$\tau' = \frac{10\,000}{8.48h} = \frac{1179}{h} \text{ psi}$$

$$\tau'' = \frac{Mc}{I} = \frac{10\,000(10)(8/2)}{135.7h} = \frac{2948}{h} \text{ psi}$$

$$\tau_{\max} = \sqrt{\tau'^2 + \tau''^2} = \frac{1}{h}(1179^2 + 2948^2)^{1/2} = \frac{3175}{h} \text{ psi}$$

Equate the maximum and allowable shear stresses.

$$\tau_{\max} = \tau_{\text{all}} = \frac{3175}{h} = 12\,800$$

from which $h = 0.248$ in. It follows that

$$I = 135.7(0.248) = 33.65 \text{ in}^4$$

The volume of the weld metal is

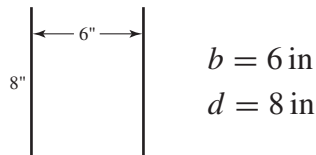
$$\text{vol} = \frac{h^2 l}{2} = \frac{0.248^2(6+6)}{2} = 0.369 \text{ in}^3$$

The effectiveness, $(\text{eff})_H$, is

$$(\text{eff})_H = \frac{I}{\text{vol}} = \frac{33.65}{0.369} = 91.2 \text{ in}$$

$$(\text{fom}')_H = \frac{I_u}{hl} = \frac{192}{0.248(6+6)} = 64.5 \text{ in}$$

Vertical parallel weld beads



From Table 9-2, category 2

$$A = 1.414hd = 1.414(h)(8) = 11.31h \text{ in}^2$$

$$\bar{x} = b/2 = 6/2 = 3 \text{ in}, \quad \bar{y} = d/2 = 8/2 = 4 \text{ in}$$

$$I_u = \frac{d^3}{6} = \frac{8^3}{6} = 85.33 \text{ in}^3$$

$$I = 0.707hI_u = 0.707(h)(85.33) = 60.3h$$

$$\tau' = \frac{10\,000}{11.31h} = \frac{884}{h} \text{ psi}$$

$$\tau'' = \frac{Mc}{I} = \frac{10\,000(10)(8/2)}{60.3h} = \frac{6633}{h} \text{ psi}$$

$$\begin{aligned} \tau_{\max} &= \sqrt{\tau'^2 + \tau''^2} = \frac{1}{h}(884^2 + 6633^2)^{1/2} \\ &= \frac{6692}{h} \text{ psi} \end{aligned}$$

Equating τ_{\max} to τ_{all} gives $h = 0.523$ in. It follows that

$$I = 60.3(0.523) = 31.5 \text{ in}^4$$

$$\text{vol} = \frac{h^2 l}{2} = \frac{0.523^2}{2}(8 + 8) = 2.19 \text{ in}^3$$

$$(\text{eff})_V = \frac{I}{\text{vol}} = \frac{31.6}{2.19} = 14.4 \text{ in}$$

$$(\text{fom}')_V = \frac{I_u}{hl} = \frac{85.33}{0.523(8 + 8)} = 10.2 \text{ in}$$

The ratio of $(\text{eff})_V/(\text{eff})_H$ is $14.4/91.2 = 0.158$. The ratio $(\text{fom}')_V/(\text{fom}')_H$ is $10.2/64.5 = 0.158$. This is not surprising since

$$\text{eff} = \frac{I}{\text{vol}} = \frac{I}{(h^2/2)l} = \frac{0.707 h I_u}{(h^2/2)l} = 1.414 \frac{I_u}{hl} = 1.414 \text{ fom}'$$

The ratios $(\text{eff})_V/(\text{eff})_H$ and $(\text{fom}')_V/(\text{fom}')_H$ give the same information.

9-20 Because the loading is pure torsion, there is no primary shear. From Table 9-1, category 6:

$$J_u = 2\pi r^3 = 2\pi(1)^3 = 6.28 \text{ in}^3$$

$$J = 0.707 h J_u = 0.707(0.25)(6.28)$$

$$= 1.11 \text{ in}^4$$

$$\tau = \frac{Tr}{J} = \frac{20(1)}{1.11} = 18.0 \text{ kpsi} \quad \text{Ans.}$$

9-21 $h = 0.375$ in, $d = 8$ in, $b = 1$ in

From Table 9-2, category 2:

$$A = 1.414(0.375)(8) = 4.24 \text{ in}^2$$

$$I_u = \frac{d^3}{6} = \frac{8^3}{6} = 85.3 \text{ in}^3$$

$$I = 0.707 h I_u = 0.707(0.375)(85.3) = 22.6 \text{ in}^4$$

$$\tau' = \frac{F}{A} = \frac{5}{4.24} = 1.18 \text{ kpsi}$$

$$M = 5(6) = 30 \text{ kip} \cdot \text{in}$$

$$c = (1 + 8 + 1 - 2)/2 = 4 \text{ in}$$

$$\tau'' = \frac{Mc}{I} = \frac{30(4)}{22.6} = 5.31 \text{ kpsi}$$

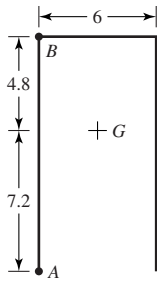
$$\tau_{\max} = \sqrt{\tau'^2 + \tau''^2} = \sqrt{1.18^2 + 5.31^2}$$

$$= 5.44 \text{ kpsi} \quad \text{Ans.}$$

9-22

$$h = 0.6 \text{ cm}, \quad b = 6 \text{ cm}, \quad d = 12 \text{ cm}.$$

Table 9-3, category 5:



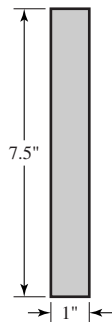
$$\begin{aligned} A &= 0.707h(b + 2d) \\ &= 0.707(0.6)[6 + 2(12)] = 12.7 \text{ cm}^2 \\ \bar{y} &= \frac{d^2}{b + 2d} = \frac{12^2}{6 + 2(12)} = 4.8 \text{ cm} \\ I_u &= \frac{2d^3}{3} - 2d^2\bar{y} + (b + 2d)\bar{y}^2 \\ &= \frac{2(12)^3}{3} - 2(12^2)(4.8) + [6 + 2(12)]4.8^2 \\ &= 461 \text{ cm}^3 \\ I &= 0.707hI_u = 0.707(0.6)(461) = 196 \text{ cm}^4 \\ \tau' &= \frac{F}{A} = \frac{7.5(10^3)}{12.7(10^2)} = 5.91 \text{ MPa} \\ M &= 7.5(120) = 900 \text{ N} \cdot \text{m} \\ c_A &= 7.2 \text{ cm}, \quad c_B = 4.8 \text{ cm} \end{aligned}$$

The critical location is at A.

$$\begin{aligned} \tau''_A &= \frac{Mc_A}{I} = \frac{900(7.2)}{196} = 33.1 \text{ MPa} \\ \tau_{\max} &= \sqrt{\tau'^2 + \tau''^2} = (5.91^2 + 33.1^2)^{1/2} = 33.6 \text{ MPa} \\ n &= \frac{\tau_{\text{all}}}{\tau_{\max}} = \frac{120}{33.6} = 3.57 \quad \text{Ans.} \end{aligned}$$

9-23 The largest possible weld size is 1/16 in. This is a small weld and thus difficult to accomplish. The bracket's load-carrying capability is not known. There are geometry problems associated with sheet metal folding, load-placement and location of the center of twist. This is not available to us. We will identify the strongest possible weldment.

Use a rectangular, weld-all-around pattern – Table 9-2, category 6:



$$\begin{aligned} A &= 1.414h(b + d) \\ &= 1.414(1/16)(1 + 7.5) \\ &= 0.751 \text{ in}^2 \\ \bar{x} &= b/2 = 0.5 \text{ in} \\ \bar{y} &= \frac{d}{2} = \frac{7.5}{2} = 3.75 \text{ in} \end{aligned}$$

$$I_u = \frac{d^2}{6}(3b + d) = \frac{7.5^2}{6}[3(1) + 7.5] = 98.4 \text{ in}^3$$

$$I = 0.707hI_u = 0.707(1/16)(98.4) = 4.35 \text{ in}^4$$

$$M = (3.75 + 0.5)W = 4.25W$$

$$\tau' = \frac{V}{A} = \frac{W}{0.751} = 1.332W$$

$$\tau'' = \frac{Mc}{I} = \frac{4.25W(7.5/2)}{4.35} = 3.664W$$

$$\tau_{\max} = \sqrt{\tau'^2 + \tau''^2} = W\sqrt{1.332^2 + 3.664^2} = 3.90W$$

Material properties: The allowable stress given is low. Let's demonstrate that.

For the A36 structural steel member, $S_y = 36$ kpsi and $S_{ut} = 58$ kpsi. For the 1020 CD attachment, use HR properties of $S_y = 30$ kpsi and $S_{ut} = 55$. The E6010 electrode has strengths of $S_y = 50$ and $S_{ut} = 62$ kpsi.

Allowable stresses:

$$\begin{aligned} \text{A36:} \quad \tau_{\text{all}} &= \min[0.3(58), 0.4(36)] \\ &= \min(17.4, 14.4) = 14.4 \text{ kpsi} \end{aligned}$$

$$\begin{aligned} \text{1020:} \quad \tau_{\text{all}} &= \min[0.3(55), 0.4(30)] \\ \tau_{\text{all}} &= \min(16.5, 12) = 12 \text{ kpsi} \end{aligned}$$

$$\begin{aligned} \text{E6010:} \quad \tau_{\text{all}} &= \min[0.3(62), 0.4(50)] \\ &= \min(18.6, 20) = 18.6 \text{ kpsi} \end{aligned}$$

Since Table 9-6 gives 18.0 kpsi as the allowable shear stress, use this lower value.

Therefore, the allowable shear stress is

$$\tau_{\text{all}} = \min(14.4, 12, 18.0) = 12 \text{ kpsi}$$

However, the allowable stress in the problem statement is 0.9 kpsi which is low from the weldment perspective. The load associated with this strength is

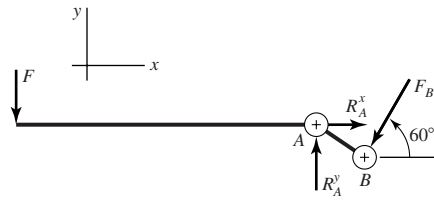
$$\begin{aligned} \tau_{\max} = \tau_{\text{all}} &= 3.90W = 900 \\ W &= \frac{900}{3.90} = 231 \text{ lbf} \end{aligned}$$

If the welding can be accomplished (1/16 leg size is a small weld), the weld strength is 12 000 psi and the load $W = 3047$ lbf. Can the bracket carry such a load?

There are geometry problems associated with sheet metal folding. Load placement is important and the center of twist has not been identified. Also, the load-carrying capability of the top bend is unknown.

These uncertainties may require the use of a different weld pattern. Our solution provides the best weldment and thus insight for comparing a welded joint to one which employs screw fasteners.

9-24



$$F = 100 \text{ lbf}, \quad \tau_{\text{all}} = 3 \text{ kpsi}$$

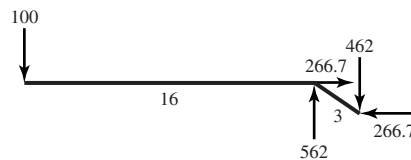
$$F_B = 100(16/3) = 533.3 \text{ lbf}$$

$$F_B^x = -533.3 \cos 60^\circ = -266.7 \text{ lbf}$$

$$F_B^y = -533.3 \cos 30^\circ = -462 \text{ lbf}$$

It follows that $R_A^y = 562 \text{ lbf}$ and $R_A^x = 266.7 \text{ lbf}$, $R_A = 622 \text{ lbf}$

$$M = 100(16) = 1600 \text{ lbf} \cdot \text{in}$$



The OD of the tubes is 1 in. From Table 9-1, category 6:

$$A = 1.414(\pi hr)(2)$$

$$= 2(1.414)(\pi h)(1/2) = 4.44h \text{ in}^2$$

$$J_u = 2\pi r^3 = 2\pi(1/2)^3 = 0.785 \text{ in}^3$$

$$J = 2(0.707)hJ_u = 1.414(0.785)h = 1.11h \text{ in}^4$$

$$\tau' = \frac{V}{A} = \frac{622}{4.44h} = \frac{140}{h}$$

$$\tau'' = \frac{Tc}{J} = \frac{Mc}{J} = \frac{1600(0.5)}{1.11h} = \frac{720.7}{h}$$

The shear stresses, τ' and τ'' , are additive algebraically

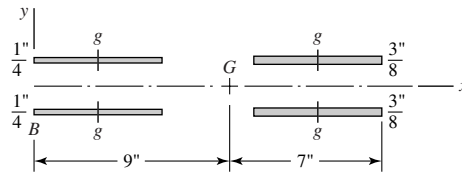
$$\tau_{\text{max}} = \frac{1}{h}(140 + 720.7) = \frac{861}{h} \text{ psi}$$

$$\tau_{\text{max}} = \tau_{\text{all}} = \frac{861}{h} = 3000$$

$$h = \frac{861}{3000} = 0.287 \rightarrow 5/16''$$

Decision: Use 5/16 in fillet welds *Ans.*

9-25



For the pattern in bending shown, find the centroid G of the weld group.

$$\bar{x} = \frac{6(0.707)(1/4)(3) + 6(0.707)(3/8)(13)}{6(0.707)(1/4) + 6(0.707)(3/8)}$$

$$= 9 \text{ in}$$

$$I_{1/4} = 2(I_G + A\bar{x}^2)$$

$$= 2\left[\frac{0.707(1/4)(6^3)}{12} + 0.707(1/4)(6)(6^2)\right]$$

$$= 82.7 \text{ in}^4$$

$$I_{3/8} = 2\left[\frac{0.707(3/8)(6^3)}{12} + 0.707(3/8)(6)(4^2)\right]$$

$$= 60.4 \text{ in}^4$$

$$I = I_{1/4} + I_{3/8} = 82.7 + 60.4 = 143.1 \text{ in}^4$$

The critical location is at B . From Eq. (9-3),

$$\tau' = \frac{F}{2[6(0.707)(3/8 + 1/4)]} = 0.189F$$

$$\tau'' = \frac{Mc}{I} = \frac{(8F)(9)}{143.1} = 0.503F$$

$$\tau_{\max} = \sqrt{\tau'^2 + \tau''^2} = F\sqrt{0.189^2 + 0.503^2} = 0.537F$$

Materials:

A36 Member: $S_y = 36 \text{ kpsi}$

1015 HR Attachment: $S_y = 27.5 \text{ kpsi}$

E6010 Electrode: $S_y = 50 \text{ kpsi}$

$$\tau_{\text{all}} = 0.577 \min(36, 27.5, 50) = 15.9 \text{ kpsi}$$

$$F = \frac{\tau_{\text{all}}/n}{0.537} = \frac{15.9/2}{0.537} = 14.8 \text{ kip} \quad \text{Ans.}$$

9-26 Figure P9-26b is a free-body diagram of the bracket. Forces and moments that act on the welds are equal, but of opposite sense.

(a) $M = 1200(0.366) = 439 \text{ lbf} \cdot \text{in} \quad \text{Ans.}$

(b) $F_y = 1200 \sin 30^\circ = 600 \text{ lbf} \quad \text{Ans.}$

(c) $F_x = 1200 \cos 30^\circ = 1039 \text{ lbf} \quad \text{Ans.}$

(d) From Table 9-2, category 6:

$$A = 1.414(0.25)(0.25 + 2.5) = 0.972 \text{ in}^2$$

$$I_u = \frac{d^2}{6}(3b + d) = \frac{2.5^2}{6}[3(0.25) + 2.5] = 3.39 \text{ in}^3$$

The second area moment about an axis through G and parallel to z is

$$I = 0.707hI_u = 0.707(0.25)(3.39) = 0.599 \text{ in}^4 \quad \text{Ans.}$$

(e) Refer to Fig. P.9-26b. The shear stress due to F_y is

$$\tau_1 = \frac{F_y}{A} = \frac{600}{0.972} = 617 \text{ psi}$$

The shear stress along the throat due to F_x is

$$\tau_2 = \frac{F_x}{A} = \frac{1039}{0.972} = 1069 \text{ psi}$$

The resultant of τ_1 and τ_2 is in the throat plane

$$\tau' = (\tau_1^2 + \tau_2^2)^{1/2} = (617^2 + 1069^2)^{1/2} = 1234 \text{ psi}$$

The bending of the throat gives

$$\tau'' = \frac{Mc}{I} = \frac{439(1.25)}{0.599} = 916 \text{ psi}$$

The maximum shear stress is

$$\tau_{\max} = (\tau'^2 + \tau''^2)^{1/2} = (1234^2 + 916^2)^{1/2} = 1537 \text{ psi} \quad \text{Ans.}$$

(f) *Materials:*

1018 HR Member: $S_y = 32 \text{ kpsi}$, $S_{ut} = 58 \text{ kpsi}$ (Table A-20)

E6010 Electrode: $S_y = 50 \text{ kpsi}$ (Table 9-3)

$$n = \frac{S_{sy}}{\tau_{\max}} = \frac{0.577S_y}{\tau_{\max}} = \frac{0.577(32)}{1.537} = 12.0 \quad \text{Ans.}$$

(g) Bending in the attachment near the base. The cross-sectional area is approximately equal to bh .

$$A_1 \doteq bh = 0.25(2.5) = 0.625 \text{ in}^2$$

$$\tau_{xy} = \frac{F_x}{A_1} = \frac{1039}{0.625} = 1662 \text{ psi}$$

$$\frac{I}{c} = \frac{bd^2}{6} = \frac{0.25(2.5)^2}{6} = 0.260 \text{ in}^3$$

At location A

$$\sigma_y = \frac{F_y}{A_1} + \frac{M}{I/c}$$

$$\sigma_y = \frac{600}{0.625} + \frac{439}{0.260} = 2648 \text{ psi}$$

The von Mises stress σ' is

$$\sigma' = (\sigma_y^2 + 3\tau_{xy}^2)^{1/2} = [2648^2 + 3(1662)^2]^{1/2} = 3912 \text{ psi}$$

Thus, the factor of safety is,

$$n = \frac{S_y}{\sigma'} = \frac{32}{3.912} = 8.18 \quad \text{Ans.}$$

The clip on the mooring line bears against the side of the 1/2-in hole. If the clip fills the hole

$$\sigma = \frac{F}{td} = \frac{-1200}{0.25(0.50)} = -9600 \text{ psi}$$

$$n = -\frac{S_y}{\sigma'} = -\frac{32(10^3)}{-9600} = 3.33 \quad \text{Ans.}$$

Further investigation of this situation requires more detail than is included in the task statement.

- (h) In shear fatigue, the weakest constituent of the weld melt is 1018 with $S_{ut} = 58$ kpsi

$$S'_e = 0.5S_{ut} = 0.5(58) = 29 \text{ kpsi}$$

Table 7-4:

$$k_a = 14.4(58)^{-0.718} = 0.780$$

For the size factor estimate, we first employ Eq. (7-24) for the equivalent diameter.

$$d_e = 0.808\sqrt{0.707hb} = 0.808\sqrt{0.707(2.5)(0.25)} = 0.537 \text{ in}$$

Eq. (7-19) is used next to find k_b

$$k_b = \left(\frac{d_e}{0.30}\right)^{-0.107} = \left(\frac{0.537}{0.30}\right)^{-0.107} = 0.940$$

The load factor for shear k_c , is

$$k_c = 0.59$$

The endurance strength in shear is

$$S_{se} = 0.780(0.940)(0.59)(29) = 12.5 \text{ kpsi}$$

From Table 9-5, the shear stress-concentration factor is $K_{fs} = 2.7$. The loading is repeatedly-applied.

$$\tau_a = \tau_m = K_{fs} \frac{\tau_{\max}}{2} = 2.7 \frac{1.537}{2} = 2.07 \text{ kpsi}$$

Table 7-10: Gerber factor of safety n_f , adjusted for shear, with $S_{su} = 0.67S_{ut}$

$$n_f = \frac{1}{2} \left[\frac{0.67(58)}{2.07} \right]^2 \left(\frac{2.07}{12.5} \right) \left\{ -1 + \sqrt{1 + \left[\frac{2(2.07)(12.5)}{0.67(58)(2.07)} \right]^2} \right\} = 5.52 \quad \text{Ans.}$$

Attachment metal should be checked for bending fatigue.

9-27 Use $b = d = 4$ in. Since $h = 5/8$ in, the primary shear is

$$\tau' = \frac{F}{1.414(5/8)(4)} = 0.283F$$

The secondary shear calculations, for a moment arm of 14 in give

$$J_u = \frac{4[3(4^2) + 4^2]}{6} = 42.67 \text{ in}^3$$

$$J = 0.707hJ_u = 0.707(5/8)42.67 = 18.9 \text{ in}^4$$

$$\tau_x'' = \tau_y'' = \frac{Mr_y}{J} = \frac{14F(2)}{18.9} = 1.48F$$

Thus, the maximum shear and allowable load are:

$$\tau_{\max} = F\sqrt{1.48^2 + (0.283 + 1.48)^2} = 2.30F$$

$$F = \frac{\tau_{\text{all}}}{2.30} = \frac{20}{2.30} = 8.70 \text{ kip} \quad \text{Ans.}$$

From Prob. 9-5b, $\tau_{\text{all}} = 11$ kpsi

$$F_{\text{all}} = \frac{\tau_{\text{all}}}{2.30} = \frac{11}{2.30} = 4.78 \text{ kip}$$

The allowable load has thus increased by a factor of 1.8 *Ans.*

9-28 Purchase the hook having the design shown in Fig. P9-28b. Referring to text Fig. 9-32a, this design reduces peel stresses.

9-29 (a)

$$\begin{aligned} \bar{\tau} &= \frac{1}{l} \int_{-l/2}^{l/2} \frac{P\omega \cosh(\omega x)}{4b \sinh(\omega l/2)} dx \\ &= A_1 \int_{-l/2}^{l/2} \cosh(\omega x) dx \\ &= \frac{A_1}{\omega} \sinh(\omega x) \Big|_{-l/2}^{l/2} \\ &= \frac{A_1}{\omega} [\sinh(\omega l/2) - \sinh(-\omega l/2)] \\ &= \frac{A_1}{\omega} [\sinh(\omega l/2) - (-\sinh(\omega l/2))] \\ &= \frac{2A_1 \sinh(\omega l/2)}{\omega} \\ &= \frac{P\omega}{4bl \sinh(\omega l/2)} [2 \sinh(\omega l/2)] \\ \bar{\tau} &= \frac{P}{2bl} \quad \text{Ans.} \end{aligned}$$

$$(b) \quad \tau(l/2) = \frac{P\omega \cosh(\omega l/2)}{4b \sinh(\omega l/2)} = \frac{P\omega}{4b \tanh(\omega l/2)} \quad \text{Ans.}$$

$$(c) \quad K = \frac{\tau(l/2)}{\bar{\tau}} = \frac{P\omega}{4b \sinh(\omega l/2)} \left(\frac{2bl}{P} \right)$$

$$K = \frac{\omega l/2}{\tanh(\omega l/2)} \quad \text{Ans.}$$

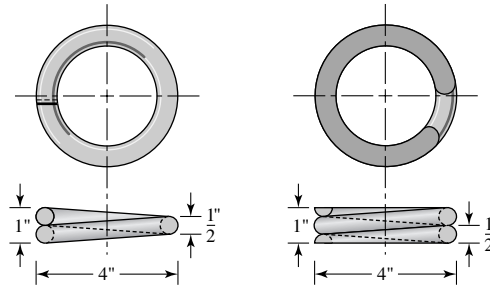
For computer programming, it can be useful to express the hyperbolic tangent in terms of exponentials:

$$K = \frac{\omega l}{2} \frac{\exp(\omega l/2) - \exp(-\omega l/2)}{\exp(\omega l/2) + \exp(-\omega l/2)} \quad \text{Ans.}$$

9-30 This is a computer programming exercise. All programs will vary.

Chapter 10

10-1



10-2 $A = Sd^m$

$$\dim(A_{\text{USCU}}) = \dim(S) \dim(d^m) = \text{kpsi} \cdot \text{in}^m$$

$$\dim(A_{\text{SI}}) = \dim(S_1) \dim(d_1^m) = \text{MPa} \cdot \text{mm}^m$$

$$A_{\text{SI}} = \frac{\text{MPa}}{\text{kpsi}} \cdot \frac{\text{mm}^m}{\text{in}^m} A_{\text{USCU}} = 6.894757(25.4)^m A_{\text{USCU}} \doteq 6.895(25.4)^m A_{\text{USCU}} \quad \text{Ans.}$$

For music wire, from Table 10-4:

$$A_{\text{USCU}} = 201, \quad m = 0.145; \quad \text{what is } A_{\text{SI}}?$$

$$A_{\text{SI}} = 6.89(25.4)^{0.145}(201) = 2214 \text{ MPa} \cdot \text{mm}^m \quad \text{Ans.}$$

10-3 Given: Music wire, $d = 0.105$ in, OD = 1.225 in, plain ground ends, $N_t = 12$ coils.

Table 10-1: $N_a = N_t - 1 = 12 - 1 = 11$

$$L_s = dN_t = 0.105(12) = 1.26 \text{ in}$$

Table 10-4: $A = 201, \quad m = 0.145$

(a) Eq. (10-14): $S_{ut} = \frac{201}{(0.105)^{0.145}} = 278.7 \text{ kpsi}$

Table 10-6: $S_{sy} = 0.45(278.7) = 125.4 \text{ kpsi}$

$$D = 1.225 - 0.105 = 1.120 \text{ in}$$

$$C = \frac{D}{d} = \frac{1.120}{0.105} = 10.67$$

Eq. (10-6): $K_B = \frac{4(10.67) + 2}{4(10.67) - 3} = 1.126$

Eq. (10-3): $F|_{S_{sy}} = \frac{\pi d^3 S_{sy}}{8K_B D} = \frac{\pi(0.105)^3(125.4)(10^3)}{8(1.126)(1.120)} = 45.2 \text{ lbf}$

Eq. (10-9): $k = \frac{d^4 G}{8D^3 N_a} = \frac{(0.105)^4(11.75)(10^6)}{8(1.120)^3(11)} = 11.55 \text{ lbf/in}$

$$L_0 = \frac{F|_{S_{sy}}}{k} + L_s = \frac{45.2}{11.55} + 1.26 = 5.17 \text{ in} \quad \text{Ans.}$$

(b) $F|_{S_{sy}} = 45.2 \text{ lbf}$ *Ans.*

(c) $k = 11.55 \text{ lbf/in}$ *Ans.*

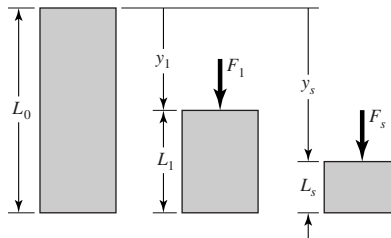
(d) $(L_0)_{cr} = \frac{2.63D}{\alpha} = \frac{2.63(1.120)}{0.5} = 5.89 \text{ in}$

Many designers provide $(L_0)_{cr}/L_0 \geq 5$ or more; therefore, plain ground ends are not often used in machinery due to buckling uncertainty.

10-4 Referring to Prob. 10-3 solution, $C = 10.67$, $N_a = 11$, $S_{sy} = 125.4 \text{ kpsi}$, $(L_0)_{cr} = 5.89 \text{ in}$ and $F = 45.2 \text{ lbf}$ (at yield).

Eq. (10-18): $4 \leq C \leq 12$ $C = 10.67$ *O.K.*

Eq. (10-19): $3 \leq N_a \leq 15$ $N_a = 11$ *O.K.*



$L_0 = 5.17 \text{ in}, \quad L_s = 1.26 \text{ in}$

$y_1 = \frac{F_1}{k} = \frac{30}{11.55} = 2.60 \text{ in}$

$L_1 = L_0 - y_1 = 5.17 - 2.60 = 2.57 \text{ in}$

$\xi = \frac{y_s}{y_1} - 1 = \frac{5.17 - 1.26}{2.60} - 1 = 0.50$

Eq. (10-20): $\xi \geq 0.15$, $\xi = 0.50$ *O.K.*

From Eq. (10-3) for static service

$\tau_1 = K_B \left(\frac{8F_1 D}{\pi d^3} \right) = 1.126 \left[\frac{8(30)(1.120)}{\pi(0.105)^3} \right] = 83\,224 \text{ psi}$

$n_s = \frac{S_{sy}}{\tau_1} = \frac{125.4(10^3)}{83\,224} = 1.51$

Eq. (10-21): $n_s \geq 1.2$, $n_s = 1.51$ *O.K.*

$\tau_s = \tau_1 \left(\frac{45.2}{30} \right) = 83\,224 \left(\frac{45.2}{30} \right) = 125\,391 \text{ psi}$

$S_{sy}/\tau_s = 125.4(10^3)/125\,391 \doteq 1$

$S_{sy}/\tau_s \geq (n_s)_d$: Not solid-safe. *Not O.K.*

$L_0 \leq (L_0)_{cr}$: $5.17 \leq 5.89$ Margin could be higher, *Not O.K.*

Design is unsatisfactory. Operate over a rod? *Ans.*

10-5 Static service spring with: HD steel wire, $d = 2$ mm, OD = 22 mm, $N_t = 8.5$ turns plain and ground ends.

Preliminaries

Table 10-5: $A = 1783 \text{ MPa} \cdot \text{mm}^m$, $m = 0.190$

Eq. (10-14): $S_{ut} = \frac{1783}{(2)^{0.190}} = 1563 \text{ MPa}$

Table 10-6: $S_{sy} = 0.45(1563) = 703.4 \text{ MPa}$

Then,

$$D = \text{OD} - d = 22 - 2 = 20 \text{ mm}$$

$$C = 20/2 = 10$$

$$K_B = \frac{4C + 2}{4C - 3} = \frac{4(10) + 2}{4(10) - 3} = 1.135$$

$$N_a = 8.5 - 1 = 7.5 \text{ turns}$$

$$L_s = 2(8.5) = 17 \text{ mm}$$

Eq. (10-21): Use $n_s = 1.2$ for solid-safe property.

$$F_s = \frac{\pi d^3 S_{sy} / n_s}{8 K_B D} = \frac{\pi (2)^3 (703.4 / 1.2)}{8 (1.135) (20)} \left[\frac{(10^{-3})^3 (10^6)}{10^{-3}} \right] = 81.12 \text{ N}$$

$$k = \frac{d^4 G}{8 D^3 N_a} = \frac{(2)^4 (79.3)}{8 (20)^3 (7.5)} \left[\frac{(10^{-3})^4 (10^9)}{(10^{-3})^3} \right] = 0.002643 (10^6) = 2643 \text{ N/m}$$

$$y_s = \frac{F_s}{k} = \frac{81.12}{2643 (10^{-3})} = 30.69 \text{ mm}$$

(a) $L_0 = y + L_s = 30.69 + 17 = 47.7 \text{ mm}$ *Ans.*

(b) Table 10-1: $p = \frac{L_0}{N_t} = \frac{47.7}{8.5} = 5.61 \text{ mm}$ *Ans.*

(c) $F_s = 81.12 \text{ N}$ (from above) *Ans.*

(d) $k = 2643 \text{ N/m}$ (from above) *Ans.*

(e) Table 10-2 and Eq. (10-13):

$$(L_0)_{cr} = \frac{2.63 D}{\alpha} = \frac{2.63(20)}{0.5} = 105.2 \text{ mm}$$

$$(L_0)_{cr} / L_0 = 105.2 / 47.7 = 2.21$$

This is less than 5. Operate over a rod?

Plain and ground ends have a poor eccentric footprint. *Ans.*

10-6 Referring to Prob. 10-5 solution: $C = 10$, $N_a = 7.5$, $k = 2643 \text{ N/m}$, $d = 2$ mm, $D = 20$ mm, $F_s = 81.12 \text{ N}$ and $N_t = 8.5$ turns.

Eq. (10-18): $4 \leq C \leq 12$, $C = 10$ *O.K.*

Eq. (10-19): $3 \leq N_a \leq 15, \quad N_a = 7.5 \quad O.K.$

$$y_1 = \frac{F_1}{k} = \frac{75}{2643(10^{-3})} = 28.4 \text{ mm}$$

$$(y)_{\text{for yield}} = \frac{81.12(1.2)}{2643(10^{-3})} = 36.8 \text{ mm}$$

$$y_s = \frac{81.12}{2643(10^{-3})} = 30.69 \text{ mm}$$

$$\xi = \frac{(y)_{\text{for yield}}}{y_1} - 1 = \frac{36.8}{28.4} - 1 = 0.296$$

Eq. (10-20): $\xi \geq 0.15, \quad \xi = 0.296 \quad O.K.$

Table 10-6: $S_{sy} = 0.45S_{ut} \quad O.K.$

As-wound

$$\tau_s = K_B \left(\frac{8F_s D}{\pi d^3} \right) = 1.135 \left[\frac{8(81.12)(20)}{\pi(2)^3} \right] \left[\frac{10^{-3}}{(10^{-3})^3(10^6)} \right] = 586 \text{ MPa}$$

Eq. (10-21): $\frac{S_{sy}}{\tau_s} = \frac{703.4}{586} = 1.2 \quad O.K.$ (Basis for Prob. 10-5 solution)

Table 10-1: $L_s = N_t d = 8.5(2) = 17 \text{ mm}$

$$L_0 = \frac{F_s}{k} + L_s = \frac{81.12}{2.643} + 17 = 47.7 \text{ mm}$$

$$\frac{2.63D}{\alpha} = \frac{2.63(20)}{0.5} = 105.2 \text{ mm}$$

$$\frac{(L_0)_{\text{cr}}}{L_0} = \frac{105.2}{47.7} = 2.21$$

which is less than 5. Operate over a rod? *Not O.K.*

Plain and ground ends have a poor eccentric footprint. *Ans.*

10-7 Given: A228 (music wire), SQ&GRD ends, $d = 0.006 \text{ in}$, $OD = 0.036 \text{ in}$, $L_0 = 0.63 \text{ in}$, $N_t = 40 \text{ turns}$.

Table 10-4: $A = 201 \text{ kpsi} \cdot \text{in}^m, \quad m = 0.145$

$$D = OD - d = 0.036 - 0.006 = 0.030 \text{ in}$$

$$C = D/d = 0.030/0.006 = 5$$

$$K_B = \frac{4(5) + 2}{4(5) - 3} = 1.294$$

Table 10-1: $N_a = N_t - 2 = 40 - 2 = 38 \text{ turns}$

$$S_{ut} = \frac{201}{(0.006)^{0.145}} = 422.1 \text{ kpsi}$$

$$S_{sy} = 0.45(422.1) = 189.9 \text{ kpsi}$$

$$k = \frac{Gd^4}{8D^3 N_a} = \frac{12(10^6)(0.006)^4}{8(0.030)^3(38)} = 1.895 \text{ lbf/in}$$

Table 10-1: $L_s = N_t d = 40(0.006) = 0.240$ in

Now $F_s = ky_s$ where $y_s = L_0 - L_s = 0.390$ in. Thus,

$$\tau_s = K_B \left[\frac{8(ky_s)D}{\pi d^3} \right] = 1.294 \left[\frac{8(1.895)(0.39)(0.030)}{\pi(0.006)^3} \right] (10^{-3}) = 338.2 \text{ kpsi} \quad (1)$$

$\tau_s > S_{sy}$, that is, $338.2 > 189.9$ kpsi; the spring is not solid-safe. Solving Eq. (1) for y_s gives

$$y'_s = \frac{(\tau_s/n_s)(\pi d^3)}{8K_B k D} = \frac{(189\,900/1.2)(\pi)(0.006)^3}{8(1.294)(1.895)(0.030)} = 0.182 \text{ in}$$

Using a design factor of 1.2,

$$L'_0 = L_s + y'_s = 0.240 + 0.182 = 0.422 \text{ in}$$

The spring should be wound to a free length of 0.422 in. *Ans.*

10-8 Given: B159 (phosphor bronze), SQ&GRD ends, $d = 0.012$ in, OD = 0.120 in, $L_0 = 0.81$ in, $N_t = 15.1$ turns.

Table 10-4: $A = 145 \text{ kpsi} \cdot \text{in}^m$, $m = 0$

Table 10-5: $G = 6 \text{ Mpsi}$

$$D = \text{OD} - d = 0.120 - 0.012 = 0.108 \text{ in}$$

$$C = D/d = 0.108/0.012 = 9$$

$$K_B = \frac{4(9) + 2}{4(9) - 3} = 1.152$$

Table 10-1: $N_a = N_t - 2 = 15.1 - 2 = 13.1$ turns

$$S_{ut} = \frac{145}{0.012^0} = 145 \text{ kpsi}$$

Table 10-6: $S_{sy} = 0.35(145) = 50.8$ kpsi

$$k = \frac{Gd^4}{8D^3 N_a} = \frac{6(10^6)(0.012)^4}{8(0.108)^3(13.1)} = 0.942 \text{ lbf/in}$$

Table 10-1: $L_s = dN_t = 0.012(15.1) = 0.181$ in

Now $F_s = ky_s$, $y_s = L_0 - L_s = 0.81 - 0.181 = 0.629$ in

$$\tau_s = K_B \left[\frac{8(ky_s)D}{\pi d^3} \right] = 1.152 \left[\frac{8(0.942)(0.6)(0.108)}{\pi(0.012)^3} \right] (10^{-3}) = 108.6 \text{ kpsi} \quad (1)$$

$\tau_s > S_{sy}$, that is, $108.6 > 50.8$ kpsi; the spring is not solid safe. Solving Eq. (1) for y'_s gives

$$y'_s = \frac{(S_{sy}/n)\pi d^3}{8K_B k D} = \frac{(50.8/1.2)(\pi)(0.012)^3(10^3)}{8(1.152)(0.942)(0.108)} = 0.245 \text{ in}$$

$$L'_0 = L_s + y'_s = 0.181 + 0.245 = 0.426 \text{ in}$$

Wind the spring to a free length of 0.426 in. *Ans.*

10-9 Given: A313 (stainless steel), SQ&GRD ends, $d = 0.040$ in, $OD = 0.240$ in, $L_0 = 0.75$ in, $N_t = 10.4$ turns.

Table 10-4: $A = 169 \text{ kpsi} \cdot \text{in}^m, \quad m = 0.146$

Table 10-5: $G = 10(10^6) \text{ psi}$
 $D = OD - d = 0.240 - 0.040 = 0.200 \text{ in}$
 $C = D/d = 0.200/0.040 = 5$

$$K_B = \frac{4(5) + 2}{4(5) - 3} = 1.294$$

Table 10-6: $N_a = N_t - 2 = 10.4 - 2 = 8.4$ turns

$$S_{ut} = \frac{169}{(0.040)^{0.146}} = 270.4 \text{ kpsi}$$

Table 10-13: $S_{sy} = 0.35(270.4) = 94.6 \text{ kpsi}$

$$k = \frac{Gd^4}{8D^3N_a} = \frac{10(10^6)(0.040)^4}{8(0.2)^3(8.4)} = 47.62 \text{ lbf/in}$$

Table 10-6: $L_s = dN_t = 0.040(10.4) = 0.416 \text{ in}$

Now $F_s = ky_s, y_s = L_0 - L_s = 0.75 - 0.416 = 0.334 \text{ in}$

$$\tau_s = K_B \left[\frac{8(ky_s)D}{\pi d^3} \right] = 1.294 \left[\frac{8(47.62)(0.334)(0.2)}{\pi(0.040)^3} \right] (10^{-3}) = 163.8 \text{ kpsi} \quad (1)$$

$\tau_s > S_{sy}$, that is, $163.8 > 94.6$ kpsi; the spring is not solid-safe. Solving Eq. (1) for y_s gives

$$y'_s = \frac{(S_{sy}/n)(\pi d^3)}{8K_B k D} = \frac{(94\,600/1.2)(\pi)(0.040)^3}{8(1.294)(47.62)(0.2)} = 0.161 \text{ in}$$

$$L'_0 = L_s + y'_s = 0.416 + 0.161 = 0.577 \text{ in}$$

Wind the spring to a free length 0.577 in. *Ans.*

10-10 Given: A227 (hard drawn steel), $d = 0.135$ in, $OD = 2.0$ in, $L_0 = 2.94$ in, $N_t = 5.25$ turns.

Table 10-4: $A = 140 \text{ kpsi} \cdot \text{in}^m, \quad m = 0.190$

Table 10-5: $G = 11.4(10^6) \text{ psi}$
 $D = OD - d = 2 - 0.135 = 1.865 \text{ in}$
 $C = D/d = 1.865/0.135 = 13.81$

$$K_B = \frac{4(13.81) + 2}{4(13.81) - 3} = 1.096$$

$N_a = N_t - 2 = 5.25 - 2 = 3.25$ turns

$$S_{ut} = \frac{140}{(0.135)^{0.190}} = 204.8 \text{ kpsi}$$

Table 10-6: $S_{sy} = 0.45(204.8) = 92.2$ kpsi

$$k = \frac{Gd^4}{8D^3N_a} = \frac{11.4(10^6)(0.135)^4}{8(1.865)^3(3.25)} = 22.45 \text{ lbf/in}$$

Table 10-1: $L_s = dN_t = 0.135(5.25) = 0.709$ in

Now $F_s = ky_s$, $y_s = L_0 - L_s = 2.94 - 0.709 = 2.231$ in

$$\tau_s = K_B \left[\frac{8(ky_s)D}{\pi d^3} \right] = 1.096 \left[\frac{8(22.45)(2.231)(1.865)}{\pi(0.135)^3} \right] (10^{-3}) = 106.0 \text{ kpsi} \quad (1)$$

$\tau_s > S_{sy}$, that is, $106 > 92.2$ kpsi; the spring is not solid-safe. Solving Eq. (1) for y_s gives

$$y'_s = \frac{(S_{sy}/n)(\pi d^3)}{8K_B k D} = \frac{(92\,200/1.2)(\pi)(0.135)^3}{8(1.096)(22.45)(1.865)} = 1.612 \text{ in}$$

$$L'_0 = L_s + y'_s = 0.709 + 1.612 = 2.321 \text{ in}$$

Wind the spring to a free length of 2.32 in. *Ans.*

10-11 Given: A229 (OQ&T steel), SQ&GRD ends, $d = 0.144$ in, OD = 1.0 in, $L_0 = 3.75$ in, $N_t = 13$ turns.

Table 10-4: $A = 147$ kpsi \cdot in^m, $m = 0.187$

Table 10-5: $G = 11.4(10^6)$ psi

$$D = \text{OD} - d = 1.0 - 0.144 = 0.856 \text{ in}$$

$$C = D/d = 0.856/0.144 = 5.944$$

$$K_B = \frac{4(5.944) + 2}{4(5.944) - 3} = 1.241$$

Table 10-1: $N_a = N_t - 2 = 13 - 2 = 11$ turns

$$S_{ut} = \frac{147}{(0.144)^{0.187}} = 211.2 \text{ kpsi}$$

Table 10-6: $S_{sy} = 0.50(211.2) = 105.6$ kpsi

$$k = \frac{Gd^4}{8D^3N_a} = \frac{11.4(10^6)(0.144)^4}{8(0.856)^3(11)} = 88.8 \text{ lbf/in}$$

Table 10-1: $L_s = dN_t = 0.144(13) = 1.872$ in

Now $F_s = ky_s$, $y_s = L_0 - L_s = 3.75 - 1.872 = 1.878$ in

$$\tau_s = K_B \left[\frac{8(ky_s)D}{\pi d^3} \right] = 1.241 \left[\frac{8(88.8)(1.878)(0.856)}{\pi(0.144)^3} \right] (10^{-3}) = 151.1 \text{ kpsi} \quad (1)$$

$\tau_s > S_{sy}$, that is, $151.1 > 105.6$ kpsi; the spring is not solid-safe. Solving Eq. (1) for y_s gives

$$y'_s = \frac{(S_{sy}/n)(\pi d^3)}{8K_B k D} = \frac{(105\,600/1.2)(\pi)(0.144)^3}{8(1.241)(88.8)(0.856)} = 1.094 \text{ in}$$

$$L'_0 = L_s + y'_s = 1.872 + 1.094 = 2.972 \text{ in}$$

Wind the spring to a free length 2.972 in. *Ans.*

10-12 Given: A232 (Cr-V steel), SQ&GRD ends, $d = 0.192$ in, OD = 3 in, $L_0 = 9$ in, $N_t = 8$ turns.

Table 10-4: $A = 169 \text{ kpsi} \cdot \text{in}^m$, $m = 0.168$

Table 10-5: $G = 11.2(10^6) \text{ psi}$

$$D = \text{OD} - d = 3 - 0.192 = 2.808 \text{ in}$$

$$C = D/d = 2.808/0.192 = 14.625 \text{ (large)}$$

$$K_B = \frac{4(14.625) + 2}{4(14.625) - 3} = 1.090$$

Table 10-1: $N_a = N_t - 2 = 8 - 2 = 6$ turns

$$S_{ut} = \frac{169}{(0.192)^{0.168}} = 223.0 \text{ kpsi}$$

Table 10-6: $S_{sy} = 0.50(223.0) = 111.5 \text{ kpsi}$

$$k = \frac{Gd^4}{8D^3N_a} = \frac{11.2(10^6)(0.192)^4}{8(2.808)^3(6)} = 14.32 \text{ lbf/in}$$

Table 10-1: $L_s = dN_t = 0.192(8) = 1.536 \text{ in}$

Now $F_s = ky_s$, $y_s = L_0 - L_s = 9 - 1.536 = 7.464 \text{ in}$

$$\tau_s = K_B \left[\frac{8(ky_s)D}{\pi d^3} \right] = 1.090 \left[\frac{8(14.32)(7.464)(2.808)}{\pi(0.192)^3} \right] (10^{-3}) = 117.7 \text{ kpsi} \quad (1)$$

$\tau_s > S_{sy}$, that is, $117.7 > 111.5$ kpsi; the spring is not solid safe. Solving Eq. (1) for y_s gives

$$y'_s = \frac{(S_{sy}/n)(\pi d^3)}{8K_B k D} = \frac{(111\,500/1.2)(\pi)(0.192)^3}{8(1.090)(14.32)(2.808)} = 5.892 \text{ in}$$

$$L'_0 = L_s + y'_s = 1.536 + 5.892 = 7.428 \text{ in}$$

Wind the spring to a free length of 7.428 in. *Ans.*

10-13 Given: A313 (stainless steel) SQ&GRD ends, $d = 0.2$ mm, OD = 0.91 mm, $L_0 = 15.9$ mm, $N_t = 40$ turns.

Table 10-4: $A = 1867 \text{ MPa} \cdot \text{mm}^m$, $m = 0.146$

Table 10-5: $G = 69.0 \text{ GPa}$

$$D = \text{OD} - d = 0.91 - 0.2 = 0.71 \text{ mm}$$

$$C = D/d = 0.71/0.2 = 3.55 \text{ (small)}$$

$$K_B = \frac{4(3.55) + 2}{4(3.55) - 3} = 1.446$$

$$N_a = N_t - 2 = 40 - 2 = 38 \text{ turns}$$

$$S_{ut} = \frac{1867}{(0.2)^{0.146}} = 2361.5 \text{ MPa}$$

Table 10-6:

$$S_{sy} = 0.35(2361.5) = 826.5 \text{ MPa}$$

$$k = \frac{d^4 G}{8D^3 N_a} = \frac{(0.2)^4 (69.0)}{8(0.71)^3 (38)} \left[\frac{(10^{-3})^4 (10^9)}{(10^{-3})^3} \right]$$

$$= 1.0147(10^{-3})(10^6) = 1014.7 \text{ N/m} \quad \text{or} \quad 1.0147 \text{ N/mm}$$

$$L_s = dN_t = 0.2(40) = 8 \text{ mm}$$

$$F_s = ky_s$$

$$y_s = L_0 - L_s = 15.9 - 8 = 7.9$$

$$\tau_s = K_B \left[\frac{8(ky_s)D}{\pi d^3} \right] = 1.446 \left[\frac{8(1.0147)(7.9)(0.71)}{\pi(0.2)^3} \right] \left[\frac{10^{-3}(10^{-3})(10^{-3})}{(10^{-3})^3} \right]$$

$$= 2620(1) = 2620 \text{ MPa} \quad (1)$$

$\tau_s > S_{sy}$, that is, $2620 > 826.5 \text{ MPa}$; the spring is not solid safe. Solve Eq. (1) for y_s giving

$$y'_s = \frac{(S_{sy}/n)(\pi d^3)}{8K_B k D} = \frac{(826.5/1.2)(\pi)(0.2)^3}{8(1.446)(1.0147)(0.71)} = 2.08 \text{ mm}$$

$$L'_0 = L_s + y'_s = 8.0 + 2.08 = 10.08 \text{ mm}$$

Wind the spring to a free length of 10.08 mm. This only addresses the solid-safe criteria. There are additional problems. *Ans.*

10-14 Given: A228 (music wire), SQ&GRD ends, $d = 1 \text{ mm}$, OD = 6.10 mm, $L_0 = 19.1 \text{ mm}$, $N_t = 10.4$ turns.

Table 10-4: $A = 2211 \text{ MPa} \cdot \text{mm}^m$, $m = 0.145$

Table 10-5: $G = 81.7 \text{ GPa}$

$$D = \text{OD} - d = 6.10 - 1 = 5.1 \text{ mm}$$

$$C = D/d = 5.1/1 = 5.1$$

$$N_a = N_t - 2 = 10.4 - 2 = 8.4 \text{ turns}$$

$$K_B = \frac{4(5.1) + 2}{4(5.1) - 3} = 1.287$$

$$S_{ut} = \frac{2211}{(1)^{0.145}} = 2211 \text{ MPa}$$

Table 10-6: $S_{sy} = 0.45(2211) = 995 \text{ MPa}$

$$k = \frac{d^4 G}{8D^3 N_a} = \frac{(1)^4 (81.7)}{8(5.1)^3 (8.4)} \left[\frac{(10^{-3})^4 (10^9)}{(10^{-3})^3} \right] = 0.009165(10^6)$$

$$= 9165 \text{ N/m} \quad \text{or} \quad 9.165 \text{ N/mm}$$

$$L_s = dN_t = 1(10.4) = 10.4 \text{ mm}$$

$$F_s = ky_s$$

$$y_s = L_0 - L_s = 19.1 - 10.4 = 8.7 \text{ mm}$$

$$\tau_s = K_B \left[\frac{8(ky_s)D}{\pi d^3} \right] = 1.287 \left[\frac{8(9.165)(8.7)(5.1)}{\pi(1)^3} \right] = 1333 \text{ MPa} \quad (1)$$

$\tau_s > S_{sy}$, that is, $1333 > 995$ MPa; the spring is not solid safe. Solve Eq. (1) for y_s giving

$$y'_s = \frac{(S_{sy}/n)(\pi d^3)}{8K_B k D} = \frac{(995/1.2)(\pi)(1)^3}{8(1.287)(9.165)(5.1)} = 5.43 \text{ mm}$$

$$L'_0 = L_s + y'_s = 10.4 + 5.43 = 15.83 \text{ mm}$$

Wind the spring to a free length of 15.83 mm. *Ans.*

10-15 Given: A229 (OQ&T spring steel), SQ&GRD ends, $d = 3.4$ mm, OD = 50.8 mm, $L_0 = 74.6$ mm, $N_t = 5.25$.

Table 10-4: $A = 1855 \text{ MPa} \cdot \text{mm}^m$, $m = 0.187$

Table 10-5: $G = 77.2 \text{ GPa}$

$$D = \text{OD} - d = 50.8 - 3.4 = 47.4 \text{ mm}$$

$$C = D/d = 47.4/3.4 = 13.94 \text{ (large)}$$

$$N_a = N_t - 2 = 5.25 - 2 = 3.25 \text{ turns}$$

$$K_B = \frac{4(13.94) + 2}{4(13.94) - 3} = 1.095$$

$$S_{ut} = \frac{1855}{(3.4)^{0.187}} = 1476 \text{ MPa}$$

Table 10-6: $S_{sy} = 0.50(1476) = 737.8 \text{ MPa}$

$$k = \frac{d^4 G}{8D^3 N_a} = \frac{(3.4)^4 (77.2)}{8(47.4)^3 (3.25)} \left[\frac{(10^{-3})^4 (10^9)}{(10^{-3})^3} \right] = 0.00375(10^6)$$

$$= 3750 \text{ N/m or } 3.750 \text{ N/mm}$$

$$L_s = dN_t = 3.4(5.25) = 17.85$$

$$F_s = ky_s$$

$$y_s = L_0 - L_s = 74.6 - 17.85 = 56.75 \text{ mm}$$

$$\tau_s = K_B \left[\frac{8(ky_s)D}{\pi d^3} \right]$$

$$= 1.095 \left[\frac{8(3.750)(56.75)(47.4)}{\pi(3.4)^3} \right] = 720.2 \text{ MPa} \quad (1)$$

$\tau_s < S_{sy}$, that is, $720.2 < 737.8$ MPa

∴ The spring is solid safe. With $n_s = 1.2$,

$$y'_s = \frac{(S_{sy}/n)(\pi d^3)}{8K_B k D} = \frac{(737.8/1.2)(\pi)(3.4)^3}{8(1.095)(3.75)(47.4)} = 48.76 \text{ mm}$$

$$L'_0 = L_s + y'_s = 17.85 + 48.76 = 66.61 \text{ mm}$$

Wind the spring to a free length of 66.61 mm. *Ans.*

10-16 Given: B159 (phosphor bronze), SQ&GRD ends, $d = 3.7$ mm, OD = 25.4 mm, $L_0 = 95.3$ mm, $N_t = 13$ turns.

Table 10-4: $A = 932 \text{ MPa} \cdot \text{mm}^m$, $m = 0.064$

Table 10-5: $G = 41.4 \text{ GPa}$

$$D = \text{OD} - d = 25.4 - 3.7 = 21.7 \text{ mm}$$

$$C = D/d = 21.7/3.7 = 5.865$$

$$K_B = \frac{4(5.865) + 2}{4(5.865) - 3} = 1.244$$

$$N_a = N_t - 2 = 13 - 2 = 11 \text{ turns}$$

$$S_{ut} = \frac{932}{(3.7)^{0.064}} = 857.1 \text{ MPa}$$

Table 10-6: $S_{sy} = 0.35(857.1) = 300 \text{ MPa}$

$$k = \frac{d^4 G}{8D^3 N_a} = \frac{(3.7)^4 (41.4)}{8(21.7)^3 (11)} \left[\frac{(10^{-3})^4 (10^9)}{(10^{-3})^3} \right] = 0.008629(10^6)$$

$$= 8629 \text{ N/m or } 8.629 \text{ N/mm}$$

$$L_s = dN_t = 3.7(13) = 48.1 \text{ mm}$$

$$F_s = ky_s$$

$$y_s = L_0 - L_s = 95.3 - 48.1 = 47.2 \text{ mm}$$

$$\tau_s = K_B \left[\frac{8(ky_s)D}{\pi d^3} \right]$$

$$= 1.244 \left[\frac{8(8.629)(47.2)(21.7)}{\pi(3.7)^3} \right] = 553 \text{ MPa} \quad (1)$$

$\tau_s > S_{sy}$, that is, $553 > 300 \text{ MPa}$; the spring is not solid-safe. Solving Eq. (1) for y_s gives

$$y'_s = \frac{(S_{sy}/n)(\pi d^3)}{8K_B k D} = \frac{(300/1.2)(\pi)(3.7)^3}{8(1.244)(8.629)(21.7)} = 21.35 \text{ mm}$$

$$L'_0 = L_s + y'_s = 48.1 + 21.35 = 69.45 \text{ mm}$$

Wind the spring to a free length of 69.45 mm. *Ans.*

10-17 Given: A232 (Cr-V steel), SQ&GRD ends, $d = 4.3$ mm, OD = 76.2 mm, $L_0 = 228.6$ mm, $N_t = 8$ turns.

Table 10-4: $A = 2005 \text{ MPa} \cdot \text{mm}^m, \quad m = 0.168$

Table 10-5: $G = 77.2 \text{ GPa}$

$$D = \text{OD} - d = 76.2 - 4.3 = 71.9 \text{ mm}$$

$$C = D/d = 71.9/4.3 = 16.72 \text{ (large)}$$

$$K_B = \frac{4(16.72) + 2}{4(16.72) - 3} = 1.078$$

$$N_a = N_t - 2 = 8 - 2 = 6 \text{ turns}$$

$$S_{ut} = \frac{2005}{(4.3)^{0.168}} = 1569 \text{ MPa}$$

Table 10-6:

$$S_{sy} = 0.50(1569) = 784.5 \text{ MPa}$$

$$k = \frac{d^4 G}{8D^3 N_a} = \frac{(4.3)^4 (77.2)}{8(71.9)^3 (6)} \left[\frac{(10^{-3})^4 (10^9)}{(10^{-3})^3} \right] = 0.001479(10^6)$$

$$= 1479 \text{ N/m} \quad \text{or} \quad 1.479 \text{ N/mm}$$

$$L_s = dN_t = 4.3(8) = 34.4 \text{ mm}$$

$$F_s = ky_s$$

$$y_s = L_0 - L_s = 228.6 - 34.4 = 194.2 \text{ mm}$$

$$\tau_s = K_B \left[\frac{8(ky_s)D}{\pi d^3} \right] = 1.078 \left[\frac{8(1.479)(194.2)(71.9)}{\pi(4.3)^3} \right] = 713.0 \text{ MPa} \quad (1)$$

$\tau_s < S_{sy}$, that is, $713.0 < 784.5$; the spring is solid safe. With $n_s = 1.2$

Eq. (1) becomes

$$y'_s = \frac{(S_{sy}/n)(\pi d^3)}{8K_B k D} = \frac{(784.5/1.2)(\pi)(4.3)^3}{8(1.078)(1.479)(71.9)} = 178.1 \text{ mm}$$

$$L'_0 = L_s + y'_s = 34.4 + 178.1 = 212.5 \text{ mm}$$

Wind the spring to a free length of $L'_0 = 212.5$ mm. *Ans.*

10-18 For the wire diameter analyzed, $G = 11.75$ Mpsi per Table 10-5. Use squared and ground ends. The following is a spread-sheet study using Fig. 10-3 for parts (a) and (b). For N_a , $k = 20/2 = 10$ lbf/in.

(a) Spring over a Rod					(b) Spring in a Hole				
Source	Parameter Values				Source	Parameter Values			
	d	0.075	0.08	0.085		d	0.075	0.08	0.085
	D	0.875	0.88	0.885		D	0.875	0.870	0.865
	ID	0.800	0.800	0.800		ID	0.800	0.790	0.780
	OD	0.950	0.960	0.970		OD	0.950	0.950	0.950
Eq. (10-2)	C	11.667	11.000	10.412	Eq. (10-2)	C	11.667	10.875	10.176
Eq. (10-9)	N_a	6.937	8.828	11.061	Eq. (10-9)	N_a	6.937	9.136	11.846
Table 10-1	N_t	8.937	10.828	13.061	Table 10-1	N_t	8.937	11.136	13.846
Table 10-1	L_s	0.670	0.866	1.110	Table 10-1	L_s	0.670	0.891	1.177
1.15y + L_s	L_0	2.970	3.166	3.410	1.15y + L_s	L_0	2.970	3.191	3.477
Eq. (10-13)	$(L_0)_{cr}$	4.603	4.629	4.655	Eq. (10-13)	$(L_0)_{cr}$	4.603	4.576	4.550
Table 10-4	A	201.000	201.000	201.000	Table 10-4	A	201.000	201.000	201.000
Table 10-4	m	0.145	0.145	0.145	Table 10-4	m	0.145	0.145	0.145
Eq. (10-14)	S_{ut}	292.626	289.900	287.363	Eq. (10-14)	S_{ut}	292.626	289.900	287.363
Table 10-6	S_{sy}	131.681	130.455	129.313	Table 10-6	S_{sy}	131.681	130.455	129.313
Eq. (10-6)	K_B	1.115	1.122	1.129	Eq. (10-6)	K_B	1.115	1.123	1.133
Eq. (10-3)	n_s	0.973	1.155	1.357	Eq. (10-3)	n_s	0.973	1.167	1.384
Eq. (10-22)	fom	-0.282	-0.391	-0.536	Eq. (10-22)	fom	-0.282	-0.398	-0.555

For $n_s \geq 1.2$, the optimal size is $d = 0.085$ in for both cases.

10-19 From the figure: $L_0 = 120$ mm, OD = 50 mm, and $d = 3.4$ mm. Thus

$$D = \text{OD} - d = 50 - 3.4 = 46.6 \text{ mm}$$

(a) By counting, $N_t = 12.5$ turns. Since the ends are squared along 1/4 turn on each end,

$$N_a = 12.5 - 0.5 = 12 \text{ turns} \quad \text{Ans.}$$

$$p = 120/12 = 10 \text{ mm} \quad \text{Ans.}$$

The solid stack is 13 diameters across the top and 12 across the bottom.

$$L_s = 13(3.4) = 44.2 \text{ mm} \quad \text{Ans.}$$

(b) $d = 3.4/25.4 = 0.1339$ in and from Table 10-5, $G = 78.6$ GPa

$$k = \frac{d^4 G}{8D^3 N_a} = \frac{(3.4)^4 (78.6)(10^9)}{8(46.6)^3 (12)} (10^{-3}) = 1080 \text{ N/m} \quad \text{Ans.}$$

(c) $F_s = k(L_0 - L_s) = 1080(120 - 44.2)(10^{-3}) = 81.9 \text{ N} \quad \text{Ans.}$

(d) $C = D/d = 46.6/3.4 = 13.71$

$$K_B = \frac{4(13.71) + 2}{4(13.71) - 3} = 1.096$$

$$\tau_s = \frac{8K_B F_s D}{\pi d^3} = \frac{8(1.096)(81.9)(46.6)}{\pi(3.4)^3} = 271 \text{ MPa} \quad \text{Ans.}$$

10-20 One approach is to select A227-47 HD steel for its low cost. Then, for $y_1 \leq 3/8$ at $F_1 = 10$ lbf, $k \geq 10/0.375 = 26.67$ lbf/in. Try $d = 0.080$ in #14 gauge

For a clearance of 0.05 in: $ID = (7/16) + 0.05 = 0.4875$ in; $OD = 0.4875 + 0.16 = 0.6475$ in

$$D = 0.4875 + 0.080 = 0.5675 \text{ in}$$

$$C = 0.5675/0.08 = 7.094$$

$$G = 11.5 \text{ Mpsi}$$

$$N_a = \frac{d^4 G}{8kD^3} = \frac{(0.08)^4(11.5)(10^6)}{8(26.67)(0.5675)^3} = 12.0 \text{ turns}$$

$$N_t = 12 + 2 = 14 \text{ turns}, \quad L_s = dN_t = 0.08(14) = 1.12 \text{ in} \quad O.K.$$

$$L_0 = 1.875 \text{ in}, \quad y_s = 1.875 - 1.12 = 0.755 \text{ in}$$

$$F_s = ky_s = 26.67(0.755) = 20.14 \text{ lbf}$$

$$K_B = \frac{4(7.094) + 2}{4(7.094) - 3} = 1.197$$

$$\tau_s = K_B \left(\frac{8F_s D}{\pi d^3} \right) = 1.197 \left[\frac{8(20.14)(0.5675)}{\pi(0.08)^3} \right] = 68\,046 \text{ psi}$$

Table 10-4:

$$A = 140 \text{ kpsi} \cdot \text{in}^m, \quad m = 0.190$$

$$S_{sy} = 0.45 \frac{140}{(0.080)^{0.190}} = 101.8 \text{ kpsi}$$

$$n = \frac{101.8}{68.05} = 1.50 > 1.2 \quad O.K.$$

$$\tau_1 = \frac{F_1}{F_s} \tau_s = \frac{10}{20.14} (68.05) = 33.79 \text{ kpsi},$$

$$n_1 = \frac{101.8}{33.79} = 3.01 > 1.5 \quad O.K.$$

There is much latitude for reducing the amount of material. Iterate on y_1 using a spreadsheet. The final results are: $y_1 = 0.32$ in, $k = 31.25$ lbf/in, $N_a = 10.3$ turns, $N_t = 12.3$ turns, $L_s = 0.985$ in, $L_0 = 1.820$ in, $y_s = 0.835$ in, $F_s = 26.1$ lbf, $K_B = 1.197$, $\tau_s = 88\,190$ kpsi, $n_s = 1.15$, and $n_1 = 3.01$.

$$ID = 0.4875 \text{ in}, \quad OD = 0.6475 \text{ in}, \quad d = 0.080 \text{ in}$$

Try other sizes and/or materials.

10-21 A stock spring catalog may have over two hundred pages of compression springs with up to 80 springs per page listed.

- Students should be aware that such catalogs exist.
- Many springs are selected from catalogs rather than designed.
- The wire size you want may not be listed.
- Catalogs may also be available on disk or the web through search routines. For example, disks are available from Century Spring at

1 – (800) – 237 – 5225

www.centuryspring.com

- It is better to familiarize yourself with vendor resources rather than invent them yourself.
- Sample catalog pages can be given to students for study.

10-22 For a coil radius given by:

$$R = R_1 + \frac{R_2 - R_1}{2\pi N} \theta$$

The torsion of a section is $T = PR$ where $dL = R d\theta$

$$\begin{aligned} \delta_p &= \frac{\partial U}{\partial P} = \frac{1}{GJ} \int T \frac{\partial T}{\partial P} dL = \frac{1}{GJ} \int_0^{2\pi N} PR^3 d\theta \\ &= \frac{P}{GJ} \int_0^{2\pi N} \left(R_1 + \frac{R_2 - R_1}{2\pi N} \theta \right)^3 d\theta \\ &= \frac{P}{GJ} \left(\frac{1}{4} \right) \left(\frac{2\pi N}{R_2 - R_1} \right) \left[\left(R_1 + \frac{R_2 - R_1}{2\pi N} \theta \right)^4 \right]_0^{2\pi N} \\ &= \frac{\pi PN}{2GJ(R_2 - R_1)} (R_2^4 - R_1^4) = \frac{\pi PN}{2GJ} (R_1 + R_2) (R_1^2 + R_2^2) \end{aligned}$$

$$J = \frac{\pi}{32} d^4 \quad \therefore \delta_p = \frac{16PN}{Gd^4} (R_1 + R_2) (R_1^2 + R_2^2)$$

$$k = \frac{P}{\delta_p} = \frac{d^4 G}{16N(R_1 + R_2)(R_1^2 + R_2^2)} \quad \text{Ans.}$$

10-23 For a food service machinery application select A313 Stainless wire.

$$G = 10(10^6) \text{ psi}$$

Note that for $0.013 \leq d \leq 0.10$ in $A = 169, m = 0.146$

$0.10 < d \leq 0.20$ in $A = 128, m = 0.263$

$$F_a = \frac{18 - 4}{2} = 7 \text{ lbf}, \quad F_m = \frac{18 + 4}{2} = 11 \text{ lbf}, \quad r = 7/11$$

$$\text{Try } d = 0.080 \text{ in}, \quad S_{ut} = \frac{169}{(0.08)^{0.146}} = 244.4 \text{ kpsi}$$

$$S_{su} = 0.67S_{ut} = 163.7 \text{ kpsi}, \quad S_{sy} = 0.35S_{ut} = 85.5 \text{ kpsi}$$

Try unpeened using Zimmerli's endurance data: $S_{sa} = 35$ kpsi, $S_{sm} = 55$ kpsi

$$\text{Gerber: } S_{se} = \frac{S_{sa}}{1 - (S_{sm}/S_{su})^2} = \frac{35}{1 - (55/163.7)^2} = 39.5 \text{ kpsi}$$

$$S_{sa} = \frac{(7/11)^2 (163.7)^2}{2(39.5)} \left\{ -1 + \sqrt{1 + \left[\frac{2(39.5)}{(7/11)(163.7)} \right]^2} \right\} = 35.0 \text{ kpsi}$$

$$\alpha = S_{sa}/n_f = 35.0/1.5 = 23.3 \text{ kpsi}$$

$$\beta = \frac{8F_a}{\pi d^2} (10^{-3}) = \left[\frac{8(7)}{\pi(0.08^2)} \right] (10^{-3}) = 2.785 \text{ kpsi}$$

$$C = \frac{2(23.3) - 2.785}{4(2.785)} + \sqrt{\left[\frac{2(23.3) - 2.785}{4(2.785)} \right]^2 - \frac{3(23.3)}{4(2.785)}} = 6.97$$

$$D = Cd = 6.97(0.08) = 0.558 \text{ in}$$

$$K_B = \frac{4(6.97) + 2}{4(6.97) - 3} = 1.201$$

$$\tau_a = K_B \left(\frac{8F_a D}{\pi d^3} \right) = 1.201 \left[\frac{8(7)(0.558)}{\pi(0.08^3)} (10^{-3}) \right] = 23.3 \text{ kpsi}$$

$$n_f = 35/23.3 = 1.50 \text{ checks}$$

$$N_a = \frac{Gd^4}{8kD^3} = \frac{10(10^6)(0.08)^4}{8(9.5)(0.558)^3} = 31.02 \text{ turns}$$

$$N_t = 31 + 2 = 33 \text{ turns}, \quad L_s = dN_t = 0.08(33) = 2.64 \text{ in}$$

$$y_{\max} = F_{\max}/k = 18/9.5 = 1.895 \text{ in},$$

$$y_s = (1 + \xi)y_{\max} = (1 + 0.15)(1.895) = 2.179 \text{ in}$$

$$L_0 = 2.64 + 2.179 = 4.819 \text{ in}$$

$$(L_0)_{\text{cr}} = 2.63 \frac{D}{\alpha} = \frac{2.63(0.558)}{0.5} = 2.935 \text{ in}$$

$$\tau_s = 1.15(18/7)\tau_a = 1.15(18/7)(23.3) = 68.9 \text{ kpsi}$$

$$n_s = S_{sy}/\tau_s = 85.5/68.9 = 1.24$$

$$f = \sqrt{\frac{kg}{\pi^2 d^2 D N_a \gamma}} = \sqrt{\frac{9.5(386)}{\pi^2 (0.08^2)(0.558)(31.02)(0.283)}} = 109 \text{ Hz}$$

These steps are easily implemented on a spreadsheet, as shown below, for different diameters.

	d_1	d_2	d_3	d_4
d	0.080	0.0915	0.1055	0.1205
m	0.146	0.146	0.263	0.263
A	169.000	169.000	128.000	128.000
S_{ut}	244.363	239.618	231.257	223.311
S_{su}	163.723	160.544	154.942	149.618
S_{sy}	85.527	83.866	80.940	78.159
S_{se}	39.452	39.654	40.046	40.469
S_{sa}	35.000	35.000	35.000	35.000
α	23.333	23.333	23.333	23.333
β	2.785	2.129	1.602	1.228
C	6.977	9.603	13.244	17.702
D	0.558	0.879	1.397	2.133
K_B	1.201	1.141	1.100	1.074
τ_a	23.333	23.333	23.333	23.333
n_f	1.500	1.500	1.500	1.500
N_a	30.893	13.594	5.975	2.858
N_t	32.993	15.594	7.975	4.858
L_s	2.639	1.427	0.841	0.585
y_s	2.179	2.179	2.179	2.179
L_0	4.818	3.606	3.020	2.764
$(L_0)_{\text{cr}}$	2.936	4.622	7.350	11.220
τ_s	69.000	69.000	69.000	69.000
n_s	1.240	1.215	1.173	1.133
f (Hz)	108.895	114.578	118.863	121.775

The shaded areas depict conditions outside the recommended design conditions. Thus, one spring is satisfactory—A313, as wound, unpeened, squared and ground,

$$d = 0.0915 \text{ in, } OD = 0.879 + 0.092 = 0.971 \text{ in, } N_t = 15.59 \text{ turns}$$

10-24 The steps are the same as in Prob. 10-23 except that the Gerber-Zimmerli criterion is replaced with Goodman-Zimmerli:

$$S_{se} = \frac{S_{sa}}{1 - (S_{sm}/S_{su})}$$

The problem then proceeds as in Prob. 10-23. The results for the wire sizes are shown below (see solution to Prob. 10-23 for additional details).

Iteration of d for the first trial									
	d_1	d_2	d_3	d_4		d_1	d_2	d_3	d_4
d	0.080	0.0915	0.1055	0.1205	d	0.080	0.0915	0.1055	0.1205
m	0.146	0.146	0.263	0.263	K_B	1.151	1.108	1.078	1.058
A	169.000	169.000	128.000	128.000	τ_a	29.008	29.040	29.090	29.127
S_{ut}	244.363	239.618	231.257	223.311	n_f	1.500	1.500	1.500	1.500
S_{su}	163.723	160.544	154.942	149.618	N_a	14.191	6.456	2.899	1.404
S_{sy}	85.527	83.866	80.940	78.159	N_t	16.191	8.456	4.899	3.404
S_{se}	52.706	53.239	54.261	55.345	L_s	1.295	0.774	0.517	0.410
S_{sa}	43.513	43.560	43.634	43.691	y_s	2.179	2.179	2.179	2.179
α	29.008	29.040	29.090	29.127	L_0	3.474	2.953	2.696	2.589
β	2.785	2.129	1.602	1.228	$(L_0)_{cr}$	3.809	5.924	9.354	14.219
C	9.052	12.309	16.856	22.433	τ_s	85.782	85.876	86.022	86.133
D	0.724	1.126	1.778	2.703	n_s	0.997	0.977	0.941	0.907
					f (Hz)	141.284	146.853	151.271	154.326

Without checking all of the design conditions, it is obvious that none of the wire sizes satisfy $n_s \geq 1.2$. Also, the Gerber line is closer to the yield line than the Goodman. Setting $n_f = 1.5$ for Goodman makes it impossible to reach the yield line ($n_s < 1$). The table below uses $n_f = 2$.

Iteration of d for the second trial									
	d_1	d_2	d_3	d_4		d_1	d_2	d_3	d_4
d	0.080	0.0915	0.1055	0.1205	d	0.080	0.0915	0.1055	0.1205
m	0.146	0.146	0.263	0.263	K_B	1.221	1.154	1.108	1.079
A	169.000	169.000	128.000	128.000	τ_a	21.756	21.780	21.817	21.845
S_{ut}	244.363	239.618	231.257	223.311	n_f	2.000	2.000	2.000	2.000
S_{su}	163.723	160.544	154.942	149.618	N_a	40.243	17.286	7.475	3.539
S_{sy}	85.527	83.866	80.940	78.159	N_t	42.243	19.286	9.475	5.539
S_{se}	52.706	53.239	54.261	55.345	L_s	3.379	1.765	1.000	0.667
S_{sa}	43.513	43.560	43.634	43.691	y_s	2.179	2.179	2.179	2.179
α	21.756	21.780	21.817	21.845	L_0	5.558	3.944	3.179	2.846
β	2.785	2.129	1.602	1.228	$(L_0)_{cr}$	2.691	4.266	6.821	10.449
C	6.395	8.864	12.292	16.485	τ_s	64.336	64.407	64.517	64.600
D	0.512	0.811	1.297	1.986	n_s	1.329	1.302	1.255	1.210
					f (Hz)	99.816	105.759	110.312	113.408

The satisfactory spring has design specifications of: A313, as wound, unpeened, squared and ground, $d = 0.0915$ in, $OD = 0.811 + 0.092 = 0.903$ in, $N_t = 19.3$ turns.

10-25 This is the same as Prob. 10-23 since $S_{se} = S_{sa} = 35$ kpsi. Therefore, design the spring using: A313, as wound, un-peened, squared and ground, $d = 0.915$ in, OD = 0.971 in, $N_t = 15.59$ turns.

10-26 For the Gerber fatigue-failure criterion, $S_{su} = 0.67S_{ut}$,

$$S_{se} = \frac{S_{sa}}{1 - (S_{sm}/S_{su})^2}, \quad S_{sa} = \frac{r^2 S_{su}^2}{2S_{se}} \left[-1 + \sqrt{1 + \left(\frac{2S_{se}}{r S_{su}} \right)^2} \right]$$

The equation for S_{sa} is the basic difference. The last 2 columns of diameters of Ex. 10-5 are presented below with additional calculations.

	$d = 0.105$	$d = 0.112$		$d = 0.105$	$d = 0.112$
S_{ut}	278.691	276.096	N_a	8.915	6.190
S_{su}	186.723	184.984	L_s	1.146	0.917
S_{se}	38.325	38.394	L_0	3.446	3.217
S_{sy}	125.411	124.243	$(L_0)_{cr}$	6.630	8.160
S_{sa}	34.658	34.652	K_B	1.111	1.095
α	23.105	23.101	τ_a	23.105	23.101
β	1.732	1.523	n_f	1.500	1.500
C	12.004	13.851	τ_s	70.855	70.844
D	1.260	1.551	n_s	1.770	1.754
ID	1.155	1.439	f_n	105.433	106.922
OD	1.365	1.663	fom	-0.973	-1.022

There are only slight changes in the results.

10-27 As in Prob. 10-26, the basic change is S_{sa} .

For Goodman,
$$S_{se} = \frac{S_{sa}}{1 - (S_{sm}/S_{su})}$$

Recalculate S_{sa} with

$$S_{sa} = \frac{r S_{se} S_{su}}{r S_{su} + S_{se}}$$

Calculations for the last 2 diameters of Ex. 10-5 are given below.

	$d = 0.105$	$d = 0.112$		$d = 0.105$	$d = 0.112$
S_{ut}	278.691	276.096	N_a	9.153	6.353
S_{su}	186.723	184.984	L_s	1.171	0.936
S_{se}	49.614	49.810	L_0	3.471	3.236
S_{sy}	125.411	124.243	$(L_0)_{cr}$	6.572	8.090
S_{sa}	34.386	34.380	K_B	1.112	1.096
α	22.924	22.920	τ_a	22.924	22.920
β	1.732	1.523	n_f	1.500	1.500
C	11.899	13.732	τ_s	70.301	70.289
D	1.249	1.538	n_s	1.784	1.768
ID	1.144	1.426	f_n	104.509	106.000
OD	1.354	1.650	fom	-0.986	-1.034

There are only slight differences in the results.

10-28 Use: $E = 28.6$ Mpsi, $G = 11.5$ Mpsi, $A = 140$ kpsi \cdot in^m, $m = 0.190$, rel cost = 1.

Try $d = 0.067$ in, $S_{ut} = \frac{140}{(0.067)^{0.190}} = 234.0$ kpsi

Table 10-6: $S_{sy} = 0.45S_{ut} = 105.3$ kpsi

Table 10-7: $S_y = 0.75S_{ut} = 175.5$ kpsi

Eq. (10-34) with $D/d = C$ and $C_1 = C$

$$\sigma_A = \frac{F_{\max}}{\pi d^2} [(K)_A(16C) + 4] = \frac{S_y}{n_y}$$

$$\frac{4C^2 - C - 1}{4C(C - 1)}(16C) + 4 = \frac{\pi d^2 S_y}{n_y F_{\max}}$$

$$4C^2 - C - 1 = (C - 1) \left(\frac{\pi d^2 S_y}{4n_y F_{\max}} - 1 \right)$$

$$C^2 - \frac{1}{4} \left(1 + \frac{\pi d^2 S_y}{4n_y F_{\max}} - 1 \right) C + \frac{1}{4} \left(\frac{\pi d^2 S_y}{4n_y F_{\max}} - 2 \right) = 0$$

$$C = \frac{1}{2} \left[\frac{\pi d^2 S_y}{16n_y F_{\max}} \pm \sqrt{\left(\frac{\pi d^2 S_y}{16n_y F_{\max}} \right)^2 - \frac{\pi d^2 S_y}{4n_y F_{\max}} + 2} \right] \text{ take positive root}$$

$$= \frac{1}{2} \left\{ \frac{\pi(0.067^2)(175.5)(10^3)}{16(1.5)(18)} + \sqrt{\left[\frac{\pi(0.067)^2(175.5)(10^3)}{16(1.5)(18)} \right]^2 - \frac{\pi(0.067)^2(175.5)(10^3)}{4(1.5)(18)} + 2} \right\} = 4.590$$

$$D = Cd = 0.3075 \text{ in}$$

$$F_i = \frac{\pi d^3 \tau_i}{8D} = \frac{\pi d^3}{8D} \left[\frac{33\,500}{\exp(0.105C)} \pm 1000 \left(4 - \frac{C - 3}{6.5} \right) \right]$$

Use the lowest F_i in the preferred range. This results in the best form.

$$F_i = \frac{\pi(0.067)^3}{8(0.3075)} \left\{ \frac{33\,500}{\exp[0.105(4.590)]} - 1000 \left(4 - \frac{4.590 - 3}{6.5} \right) \right\} = 6.505 \text{ lbf}$$

For simplicity, we will round up to the next integer or half integer; therefore, use $F_i = 7$ lbf

$$k = \frac{18 - 7}{0.5} = 22 \text{ lbf/in}$$

$$N_a = \frac{d^4 G}{8kD^3} = \frac{(0.067)^4(11.5)(10^6)}{8(22)(0.3075)^3} = 45.28 \text{ turns}$$

$$N_b = N_a - \frac{G}{E} = 45.28 - \frac{11.5}{28.6} = 44.88 \text{ turns}$$

$$L_0 = (2C - 1 + N_b)d = [2(4.590) - 1 + 44.88](0.067) = 3.555 \text{ in}$$

$$L_{18\text{lbf}} = 3.555 + 0.5 = 4.055 \text{ in}$$

$$\text{Body: } K_B = \frac{4C + 2}{4C - 3} = \frac{4(4.590) + 2}{4(4.590) - 3} = 1.326$$

$$\tau_{\max} = \frac{8K_B F_{\max} D}{\pi d^3} = \frac{8(1.326)(18)(0.3075)}{\pi(0.067)^3} (10^{-3}) = 62.1 \text{ kpsi}$$

$$(n_y)_{\text{body}} = \frac{S_{sy}}{\tau_{\max}} = \frac{105.3}{62.1} = 1.70$$

$$r_2 = 2d = 2(0.067) = 0.134 \text{ in, } C_2 = \frac{2r_2}{d} = \frac{2(0.134)}{0.067} = 4$$

$$(K)_B = \frac{4C_2 - 1}{4C_2 - 4} = \frac{4(4) - 1}{4(4) - 4} = 1.25$$

$$\tau_B = (K)_B \left[\frac{8F_{\max} D}{\pi d^3} \right] = 1.25 \left[\frac{8(18)(0.3075)}{\pi(0.067)^3} \right] (10^{-3}) = 58.58 \text{ kpsi}$$

$$(n_y)_B = \frac{S_{sy}}{\tau_B} = \frac{105.3}{58.58} = 1.80$$

$$\text{fom} = -(1) \frac{\pi^2 d^2 (N_b + 2) D}{4} = - \frac{\pi^2 (0.067)^2 (44.88 + 2) (0.3075)}{4} = -0.160$$

Several diameters, evaluated using a spreadsheet, are shown below.

d :	0.067	0.072	0.076	0.081	0.085	0.09	0.095	0.104
S_{ut}	233.977	230.799	228.441	225.692	223.634	221.219	218.958	215.224
S_{sy}	105.290	103.860	102.798	101.561	100.635	99.548	98.531	96.851
S_y	175.483	173.100	171.331	169.269	167.726	165.914	164.218	161.418
C	4.589	5.412	6.099	6.993	7.738	8.708	9.721	11.650
D	0.307	0.390	0.463	0.566	0.658	0.784	0.923	1.212
F_i (calc)	6.505	5.773	5.257	4.675	4.251	3.764	3.320	2.621
F_i (rd)	7.0	6.0	5.5	5.0	4.5	4.0	3.5	3.0
k	22.000	24.000	25.000	26.000	27.000	28.000	29.000	30.000
N_a	45.29	27.20	19.27	13.10	9.77	7.00	5.13	3.15
N_b	44.89	26.80	18.86	12.69	9.36	6.59	4.72	2.75
L_0	3.556	2.637	2.285	2.080	2.026	2.071	2.201	2.605
$L_{18 \text{ lbf}}$	4.056	3.137	2.785	2.580	2.526	2.571	2.701	3.105
K_B	1.326	1.268	1.234	1.200	1.179	1.157	1.139	1.115
τ_{\max}	62.118	60.686	59.707	58.636	57.875	57.019	56.249	55.031
$(n_y)_{\text{body}}$	1.695	1.711	1.722	1.732	1.739	1.746	1.752	1.760
τ_B	58.576	59.820	60.495	61.067	61.367	61.598	61.712	61.712
$(n_y)_B$	1.797	1.736	1.699	1.663	1.640	1.616	1.597	1.569
$(n_y)_A$	1.500	1.500	1.500	1.500	1.500	1.500	1.500	1.500
fom	-0.160	-0.144	-0.138	-0.135	-0.133	-0.135	-0.138	-0.154

Except for the 0.067 in wire, all springs satisfy the requirements of length and number of coils. The 0.085 in wire has the highest fom.

10-29 Given: $N_b = 84$ coils, $F_i = 16$ lbf, OQ&T steel, OD = 1.5 in, $d = 0.162$ in.

$$D = 1.5 - 0.162 = 1.338 \text{ in}$$

(a) Eq. (10-39):

$$\begin{aligned} L_0 &= 2(D - d) + (N_b + 1)d \\ &= 2(1.338 - 0.162) + (84 + 1)(0.162) = 16.12 \text{ in} \quad \text{Ans.} \end{aligned}$$

or $2d + L_0 = 2(0.162) + 16.12 = 16.45 \text{ in overall.}$

(b)
$$C = \frac{D}{d} = \frac{1.338}{0.162} = 8.26$$

$$K_B = \frac{4(8.26) + 2}{4(8.26) - 3} = 1.166$$

$$\tau_i = K_B \left[\frac{8F_i D}{\pi d^3} \right] = 1.166 \left[\frac{8(16)(1.338)}{\pi(0.162)^3} \right] = 14\,950 \text{ psi} \quad \text{Ans.}$$

(c) From Table 10-5 use: $G = 11.4(10^6)$ psi and $E = 28.5(10^6)$ psi

$$N_a = N_b + \frac{G}{E} = 84 + \frac{11.4}{28.5} = 84.4 \text{ turns}$$

$$k = \frac{d^4 G}{8D^3 N_a} = \frac{(0.162)^4 (11.4)(10^6)}{8(1.338)^3 (84.4)} = 4.855 \text{ lbf/in} \quad \text{Ans.}$$

(d) Table 10-4: $A = 147 \text{ psi} \cdot \text{in}^m$, $m = 0.187$

$$S_{ut} = \frac{147}{(0.162)^{0.187}} = 207.1 \text{ kpsi}$$

$$S_y = 0.75(207.1) = 155.3 \text{ kpsi}$$

$$S_{sy} = 0.50(207.1) = 103.5 \text{ kpsi}$$

Body

$$\begin{aligned} F &= \frac{\pi d^3 S_{sy}}{\pi K_B D} \\ &= \frac{\pi(0.162)^3 (103.5)(10^3)}{8(1.166)(1.338)} = 110.8 \text{ lbf} \end{aligned}$$

Torsional stress on hook point B

$$C_2 = \frac{2r_2}{d} = \frac{2(0.25 + 0.162/2)}{0.162} = 4.086$$

$$(K)_B = \frac{4C_2 - 1}{4C_2 - 4} = \frac{4(4.086) - 1}{4(4.086) - 4} = 1.243$$

$$F = \frac{\pi(0.162)^3 (103.5)(10^3)}{8(1.243)(1.338)} = 103.9 \text{ lbf}$$

Normal stress on hook point A

$$C_1 = \frac{2r_1}{d} = \frac{1.338}{0.162} = 8.26$$

$$(K)_A = \frac{4C_1^2 - C_1 - 1}{4C_1(C_1 - 1)} = \frac{4(8.26)^2 - 8.26 - 1}{4(8.26)(8.26 - 1)} = 1.099$$

$$S_{yt} = \sigma = F \left[\frac{16(K)_A D}{\pi d^3} + \frac{4}{\pi d^2} \right]$$

$$F = \frac{155.3(10^3)}{[16(1.099)(1.338)]/[\pi(0.162)^3] + \{4/[\pi(0.162)^2]\}} = 85.8 \text{ lbf}$$

$$= \min(110.8, 103.9, 85.8) = 85.8 \text{ lbf} \quad \text{Ans.}$$

(e) Eq. (10-48):

$$y = \frac{F - F_i}{k} = \frac{85.8 - 16}{4.855} = 14.4 \text{ in} \quad \text{Ans.}$$

10-30 $F_{\min} = 9 \text{ lbf}$, $F_{\max} = 18 \text{ lbf}$

$$F_a = \frac{18 - 9}{2} = 4.5 \text{ lbf}, \quad F_m = \frac{18 + 9}{2} = 13.5 \text{ lbf}$$

A313 stainless: $0.013 \leq d \leq 0.1$ $A = 169 \text{ kpsi} \cdot \text{in}^m$, $m = 0.146$

$0.1 \leq d \leq 0.2$ $A = 128 \text{ kpsi} \cdot \text{in}^m$, $m = 0.263$

$E = 28 \text{ Mpsi}$, $G = 10 \text{ Gpsi}$

Try $d = 0.081 \text{ in}$ and refer to the discussion following Ex. 10-7

$$S_{ut} = \frac{169}{(0.081)^{0.146}} = 243.9 \text{ kpsi}$$

$$S_{su} = 0.67S_{ut} = 163.4 \text{ kpsi}$$

$$S_{sy} = 0.35S_{ut} = 85.4 \text{ kpsi}$$

$$S_y = 0.55S_{ut} = 134.2 \text{ kpsi}$$

Table 10-8: $S_r = 0.45S_{ut} = 109.8 \text{ kpsi}$

$$S_e = \frac{S_r/2}{1 - [S_r/(2S_{ut})]^2} = \frac{109.8/2}{1 - [(109.8/2)/243.9]^2} = 57.8 \text{ kpsi}$$

$$r = F_a/F_m = 4.5/13.5 = 0.333$$

Table 6-7:
$$S_a = \frac{r^2 S_{ut}^2}{2S_e} \left[-1 + \sqrt{1 + \left(\frac{2S_e}{r S_{ut}} \right)^2} \right]$$

$$S_a = \frac{(0.333)^2 (243.9^2)}{2(57.8)} \left[-1 + \sqrt{1 + \left[\frac{2(57.8)}{0.333(243.9)} \right]^2} \right] = 42.2 \text{ kpsi}$$

Hook bending

$$(\sigma_a)_A = F_a \left[(K)_A \frac{16C}{\pi d^2} + \frac{4}{\pi d^2} \right] = \frac{S_a}{(n_f)_A} = \frac{S_a}{2}$$

$$\frac{4.5}{\pi d^2} \left[\frac{(4C^2 - C - 1)16C}{4C(C - 1)} + 4 \right] = \frac{S_a}{2}$$

This equation reduces to a quadratic in C —see Prob. 10-28

The useable root for C is

$$C = 0.5 \left[\frac{\pi d^2 S_a}{144} + \sqrt{\left(\frac{\pi d^2 S_a}{144} \right)^2 - \frac{\pi d^2 S_a}{36} + 2} \right]$$

$$= 0.5 \left\{ \frac{\pi(0.081)^2(42.2)(10^3)}{144} + \sqrt{\left[\frac{\pi(0.081)^2(42.2)(10^3)}{144} \right]^2 - \frac{\pi(0.081)^2(42.2)(10^3)}{36} + 2} \right\}$$

$$= 4.91$$

$$D = Cd = 0.398 \text{ in}$$

$$F_i = \frac{\pi d^3 \tau_i}{8D} = \frac{\pi d^3}{8D} \left[\frac{33\,500}{\exp(0.105C)} \pm 1000 \left(4 - \frac{C-3}{6.5} \right) \right]$$

Use the lowest F_i in the preferred range.

$$F_i = \frac{\pi(0.081)^3}{8(0.398)} \left\{ \frac{33\,500}{\exp[0.105(4.91)]} - 1000 \left(4 - \frac{4.91-3}{6.5} \right) \right\}$$

$$= 8.55 \text{ lbf}$$

For simplicity we will round up to next 1/4 integer.

$$F_i = 8.75 \text{ lbf}$$

$$k = \frac{18-9}{0.25} = 36 \text{ lbf/in}$$

$$N_a = \frac{d^4 G}{8kD^3} = \frac{(0.081)^4(10)(10^6)}{8(36)(0.398)^3} = 23.7 \text{ turns}$$

$$N_b = N_a - \frac{G}{E} = 23.7 - \frac{10}{28} = 23.3 \text{ turns}$$

$$L_0 = (2C - 1 + N_b)d = [2(4.91) - 1 + 23.3](0.081) = 2.602 \text{ in}$$

$$L_{\max} = L_0 + (F_{\max} - F_i)/k = 2.602 + (18 - 8.75)/36 = 2.859 \text{ in}$$

$$(\sigma_a)_A = \frac{4.5(4)}{\pi d^2} \left(\frac{4C^2 - C - 1}{C - 1} + 1 \right)$$

$$= \frac{18(10^{-3})}{\pi(0.081^2)} \left[\frac{4(4.91^2) - 4.91 - 1}{4.91 - 1} + 1 \right] = 21.1 \text{ kpsi}$$

$$(n_f)_A = \frac{S_a}{(\sigma_a)_A} = \frac{42.2}{21.1} = 2 \text{ checks}$$

Body:

$$K_B = \frac{4C + 2}{4C - 3} = \frac{4(4.91) + 2}{4(4.91) - 3} = 1.300$$

$$\tau_a = \frac{8(1.300)(4.5)(0.398)}{\pi(0.081)^3} (10^{-3}) = 11.16 \text{ kpsi}$$

$$\tau_m = \frac{F_m}{F_a} \tau_a = \frac{13.5}{4.5} (11.16) = 33.47 \text{ kpsi}$$

The repeating allowable stress from Table 7-8 is

$$S_{sr} = 0.30S_{ut} = 0.30(243.9) = 73.17 \text{ kpsi}$$

The Gerber intercept is

$$S_{se} = \frac{73.17/2}{1 - [(73.17/2)/163.4]^2} = 38.5 \text{ kpsi}$$

From Table 6-7,

$$(n_f)_{\text{body}} = \frac{1}{2} \left(\frac{163.4}{33.47} \right)^2 \left(\frac{11.16}{38.5} \right) \left\{ -1 + \sqrt{1 + \left[\frac{2(33.47)(38.5)}{163.4(11.16)} \right]^2} \right\} = 2.53$$

Let $r_2 = 2d = 2(0.081) = 0.162$

$$C_2 = \frac{2r_2}{d} = 4, \quad (K)_B = \frac{4(4) - 1}{4(4) - 4} = 1.25$$

$$(\tau_a)_B = \frac{(K)_B}{K_B} \tau_a = \frac{1.25}{1.30}(11.16) = 10.73 \text{ kpsi}$$

$$(\tau_m)_B = \frac{(K)_B}{K_B} \tau_m = \frac{1.25}{1.30}(33.47) = 32.18 \text{ kpsi}$$

Table 10-8: $(S_{sr})_B = 0.28S_{ut} = 0.28(243.9) = 68.3 \text{ kpsi}$

$$(S_{se})_B = \frac{68.3/2}{1 - [(68.3/2)/163.4]^2} = 35.7 \text{ kpsi}$$

$$(n_f)_B = \frac{1}{2} \left(\frac{163.4}{32.18} \right)^2 \left(\frac{10.73}{35.7} \right) \left\{ -1 + \sqrt{1 + \left[\frac{2(32.18)(35.7)}{163.4(10.73)} \right]^2} \right\} = 2.51$$

Yield

Bending:

$$\begin{aligned} (\sigma_A)_{\text{max}} &= \frac{4F_{\text{max}}}{\pi d^2} \left[\frac{(4C^2 - C - 1)}{C - 1} + 1 \right] \\ &= \frac{4(18)}{\pi(0.081^2)} \left[\frac{4(4.91)^2 - 4.91 - 1}{4.91 - 1} + 1 \right] (10^{-3}) = 84.4 \text{ kpsi} \end{aligned}$$

$$(n_y)_A = \frac{134.2}{84.4} = 1.59$$

Body:

$$\tau_i = (F_i/F_a)\tau_a = (8.75/4.5)(11.16) = 21.7 \text{ kpsi}$$

$$r = \tau_a/(\tau_m - \tau_i) = 11.16/(33.47 - 21.7) = 0.948$$

$$(S_{sa})_y = \frac{r}{r + 1}(S_{sy} - \tau_i) = \frac{0.948}{0.948 + 1}(85.4 - 21.7) = 31.0 \text{ kpsi}$$

$$(n_y)_{\text{body}} = \frac{(S_{sa})_y}{\tau_a} = \frac{31.0}{11.16} = 2.78$$

Hook shear:

$$S_{sy} = 0.3S_{ut} = 0.3(243.9) = 73.2 \text{ kpsi}$$

$$\tau_{\text{max}} = (\tau_a)_B + (\tau_m)_B = 10.73 + 32.18 = 42.9 \text{ kpsi}$$

$$(n_y)_B = \frac{73.2}{42.9} = 1.71$$

$$\text{fom} = -\frac{7.6\pi^2 d^2 (N_b + 2) D}{4} = -\frac{7.6\pi^2 (0.081)^2 (23.3 + 2)(0.398)}{4} = -1.239$$

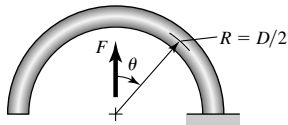
A tabulation of several wire sizes follow

d	0.081	0.085	0.092	0.098	0.105	0.12
S_{ut}	243.920	242.210	239.427	237.229	234.851	230.317
S_{su}	163.427	162.281	160.416	158.943	157.350	154.312
S_r	109.764	108.994	107.742	106.753	105.683	103.643
S_e	57.809	57.403	56.744	56.223	55.659	54.585
S_a	42.136	41.841	41.360	40.980	40.570	39.786
C	4.903	5.484	6.547	7.510	8.693	11.451
D	0.397	0.466	0.602	0.736	0.913	1.374
OD	0.478	0.551	0.694	0.834	1.018	1.494
F_i (calc)	8.572	7.874	6.798	5.987	5.141	3.637
F_i (rd)	8.75	9.75	10.75	11.75	12.75	13.75
k	36.000	36.000	36.000	36.000	36.000	36.000
N_a	23.86	17.90	11.38	8.03	5.55	2.77
N_b	23.50	17.54	11.02	7.68	5.19	2.42
L_0	2.617	2.338	2.127	2.126	2.266	2.918
$L_{18 \text{ lbf}}$	2.874	2.567	2.328	2.300	2.412	3.036
$(\sigma_a)_A$	21.068	20.920	20.680	20.490	20.285	19.893
$(n_f)_A$	2.000	2.000	2.000	2.000	2.000	2.000
K_B	1.301	1.264	1.216	1.185	1.157	1.117
$(\tau_a)_{\text{body}}$	11.141	10.994	10.775	10.617	10.457	10.177
$(\tau_m)_{\text{body}}$	33.424	32.982	32.326	31.852	31.372	30.532
S_{sr}	73.176	72.663	71.828	71.169	70.455	69.095
S_{se}	38.519	38.249	37.809	37.462	37.087	36.371
$(n_f)_{\text{body}}$	2.531	2.547	2.569	2.583	2.596	2.616
$(K)_B$	1.250	1.250	1.250	1.250	1.250	1.250
$(\tau_a)_B$	10.705	10.872	11.080	11.200	11.294	11.391
$(\tau_m)_B$	32.114	32.615	33.240	33.601	33.883	34.173
$(S_{sr})_B$	68.298	67.819	67.040	66.424	65.758	64.489
$(S_{se})_B$	35.708	35.458	35.050	34.728	34.380	33.717
$(n_f)_B$	2.519	2.463	2.388	2.341	2.298	2.235
S_y	134.156	133.215	131.685	130.476	129.168	126.674
$(\sigma_A)_{\text{max}}$	84.273	83.682	82.720	81.961	81.139	79.573
$(n_y)_A$	1.592	1.592	1.592	1.592	1.592	1.592
τ_i	21.663	23.820	25.741	27.723	29.629	31.097
r	0.945	1.157	1.444	1.942	2.906	4.703
$(S_{sy})_{\text{body}}$	85.372	84.773	83.800	83.030	82.198	80.611
$(S_{sa})_y$	30.958	32.688	34.302	36.507	39.109	40.832
$(n_y)_{\text{body}}$	2.779	2.973	3.183	3.438	3.740	4.012
$(S_{sy})_B$	73.176	72.663	71.828	71.169	70.455	69.095
$(\tau_B)_{\text{max}}$	42.819	43.486	44.321	44.801	45.177	45.564
$(n_y)_B$	1.709	1.671	1.621	1.589	1.560	1.516
fom	-1.246	-1.234	-1.245	-1.283	-1.357	-1.639

optimal fom

The shaded areas show the conditions not satisfied.

10-31 For the hook,



$$M = FR \sin \theta, \quad \partial M / \partial F = R \sin \theta$$

$$\delta_F = \frac{1}{EI} \int_0^{\pi/2} FR^2 \sin^2 R d\theta = \frac{\pi PR^3}{2 EI}$$

The total deflection of the body and the two hooks

$$\begin{aligned} \delta &= \frac{8FD^3 N_b}{d^4 G} + 2 \frac{\pi FR^3}{2 EI} = \frac{8FD^3 N_b}{d^4 G} + \frac{\pi F(D/2)^3}{E(\pi/64)(d^4)} \\ &= \frac{8FD^3}{d^4 G} \left(N_b + \frac{G}{E} \right) = \frac{8FD^3 N_a}{d^4 G} \end{aligned}$$

$$\therefore N_a = N_b + \frac{G}{E} \quad \text{QED}$$

10-32 Table 10-4 for A227:

$$A = 140 \text{ kpsi} \cdot \text{in}^m, \quad m = 0.190$$

Table 10-5:

$$E = 28.5(10^6) \text{ psi}$$

$$S_{ut} = \frac{140}{(0.162)^{0.190}} = 197.8 \text{ kpsi}$$

Eq. (10-57):

$$S_y = \sigma_{\text{all}} = 0.78(197.8) = 154.3 \text{ kpsi}$$

$$D = 1.25 - 0.162 = 1.088 \text{ in}$$

$$C = D/d = 1.088/0.162 = 6.72$$

$$K_i = \frac{4C^2 - C - 1}{4C(C - 1)} = \frac{4(6.72)^2 - 6.72 - 1}{4(6.72)(6.72 - 1)} = 1.125$$

From

$$\sigma = K_i \frac{32M}{\pi d^3}$$

Solving for M for the yield condition,

$$M_y = \frac{\pi d^3 S_y}{32 K_i} = \frac{\pi (0.162)^3 (154\,300)}{32 (1.125)} = 57.2 \text{ lbf} \cdot \text{in}$$

Count the turns when $M = 0$

$$N = 2.5 - \frac{M_y}{d^4 E / (10.8 D N)}$$

from which

$$\begin{aligned} N &= \frac{2.5}{1 + [10.8 D M_y / (d^4 E)]} \\ &= \frac{2.5}{1 + \{[10.8(1.088)(57.2)] / [(0.162)^4 (28.5)(10^6)]\}} = 2.417 \text{ turns} \end{aligned}$$

This means $(2.5 - 2.417)(360^\circ)$ or 29.9° from closed. Treating the hand force as in the middle of the grip

$$r = 1 + \frac{3.5}{2} = 2.75 \text{ in}$$

$$F = \frac{M_y}{r} = \frac{57.2}{2.75} = 20.8 \text{ lbf} \quad \text{Ans.}$$

10-33 The spring material and condition are unknown. Given $d = 0.081$ in and OD = 0.500,

(a) $D = 0.500 - 0.081 = 0.419$ in

Using $E = 28.6$ Mpsi for an estimate

$$k' = \frac{d^4 E}{10.8 D N} = \frac{(0.081)^4 (28.6)(10^6)}{10.8(0.419)(11)} = 24.7 \text{ lbf} \cdot \text{in/turn}$$

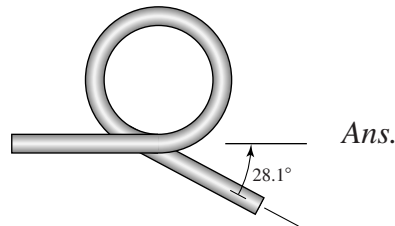
for each spring. The moment corresponding to a force of 8 lbf

$$Fr = (8/2)(3.3125) = 13.25 \text{ lbf} \cdot \text{in/spring}$$

The fraction windup turn is

$$n = \frac{Fr}{k'} = \frac{13.25}{24.7} = 0.536 \text{ turns}$$

The arm swings through an arc of slightly less than 180° , say 165° . This uses up $165/360$ or 0.458 turns. So $n = 0.536 - 0.458 = 0.078$ turns are left (or $0.078(360^\circ) = 28.1^\circ$). The original configuration of the spring was



(b)

$$C = \frac{0.419}{0.081} = 5.17$$

$$K_i = \frac{4(5.17)^2 - 5.17 - 1}{4(5.17)(5.17 - 1)} = 1.168$$

$$\sigma = K_i \frac{32M}{\pi d^3}$$

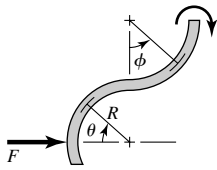
$$= 1.168 \left[\frac{32(13.25)}{\pi(0.081)^3} \right] = 296\,623 \text{ psi} \quad \text{Ans.}$$

To achieve this stress level, the spring had to have set removed.

10-34 Consider half and double results

Straight section:  $M = 3FR, \quad \frac{\partial M}{\partial P} = 3R$

Upper 180° section:



$$M = F[R + R(1 - \cos \phi)]$$

$$= FR(2 - \cos \phi), \quad \frac{\partial M}{\partial P} = R(2 - \cos \phi)$$

Lower section:

$$M = FR \sin \theta$$

$$\frac{\partial M}{\partial P} = R \sin \theta$$

Considering bending only:

$$\delta = \frac{2}{EI} \left[\int_0^{L/2} 9FR^2 dx + \int_0^\pi FR^2(2 - \cos \phi)^2 R d\phi + \int_0^{\pi/2} F(R \sin \theta)^2 R d\theta \right]$$

$$= \frac{2F}{EI} \left[\frac{9}{2}R^2L + R^3 \left(4\pi - 4 \sin \phi \Big|_0^\pi + \frac{\pi}{2} \right) + R^3 \left(\frac{\pi}{4} \right) \right]$$

$$= \frac{2FR^2}{EI} \left(\frac{19\pi}{4}R + \frac{9}{2}L \right) = \frac{FR^2}{2EI} (19\pi R + 18L) \quad \text{Ans.}$$

10-35 Computer programs will vary.

10-36 Computer programs will vary.

Chapter 11

11-1 For the deep-groove 02-series ball bearing with $R = 0.90$, the design life x_D , in multiples of rating life, is

$$x_D = \frac{30\,000(300)(60)}{10^6} = 540 \quad \text{Ans.}$$

The design radial load F_D is

$$F_D = 1.2(1.898) = 2.278 \text{ kN}$$

From Eq. (11-6),

$$\begin{aligned} C_{10} &= 2.278 \left\{ \frac{540}{0.02 + 4.439[\ln(1/0.9)]^{1/1.483}} \right\}^{1/3} \\ &= 18.59 \text{ kN} \quad \text{Ans.} \end{aligned}$$

Table 11-2: Choose a 02-30 mm with $C_{10} = 19.5 \text{ kN}$. *Ans.*

Eq. (11-18):

$$\begin{aligned} R &= \exp \left\{ - \left[\frac{540(2.278/19.5)^3 - 0.02}{4.439} \right]^{1.483} \right\} \\ &= 0.919 \quad \text{Ans.} \end{aligned}$$

11-2 For the Angular-contact 02-series ball bearing as described, the rating life multiple is

$$x_D = \frac{50\,000(480)(60)}{10^6} = 1440$$

The design load is radial and equal to

$$F_D = 1.4(610) = 854 \text{ lbf} = 3.80 \text{ kN}$$

Eq. (11-6):

$$\begin{aligned} C_{10} &= 854 \left\{ \frac{1440}{0.02 + 4.439[\ln(1/0.9)]^{1/1.483}} \right\}^{1/3} \\ &= 9665 \text{ lbf} = 43.0 \text{ kN} \end{aligned}$$

Table 11-2: Select a 02-55 mm with $C_{10} = 46.2 \text{ kN}$. *Ans.*

Using Eq. (11-18),

$$\begin{aligned} R &= \exp \left\{ - \left[\frac{1440(3.8/46.2)^3 - 0.02}{4.439} \right]^{1.483} \right\} \\ &= 0.927 \quad \text{Ans.} \end{aligned}$$

11-3 For the straight-Roller 03-series bearing selection, $x_D = 1440$ rating lives from Prob. 11-2 solution.

$$F_D = 1.4(1650) = 2310 \text{ lbf} = 10.279 \text{ kN}$$

$$C_{10} = 10.279 \left(\frac{1440}{1} \right)^{3/10} = 91.1 \text{ kN}$$

Table 11-3: Select a 03-55 mm with $C_{10} = 102 \text{ kN}$. *Ans.*

Using Eq. (11-18),

$$R = \exp \left\{ - \left[\frac{1440(10.28/102)^{10/3} - 0.02}{4.439} \right]^{1.483} \right\} = 0.942 \quad \textit{Ans.}$$

11-4 We can choose a reliability goal of $\sqrt{0.90} = 0.95$ for each bearing. We make the selections, find the existing reliabilities, multiply them together, and observe that the reliability goal is exceeded due to the roundup of capacity upon table entry.

Another possibility is to use the reliability of one bearing, say R_1 . Then set the reliability goal of the second as

$$R_2 = \frac{0.90}{R_1}$$

or vice versa. This gives three pairs of selections to compare in terms of cost, geometry implications, etc.

11-5 Establish a reliability goal of $\sqrt{0.90} = 0.95$ for each bearing. For a 02-series angular contact ball bearing,

$$C_{10} = 854 \left\{ \frac{1440}{0.02 + 4.439[\ln(1/0.95)]^{1/1.483}} \right\}^{1/3}$$

$$= 11\,315 \text{ lbf} = 50.4 \text{ kN}$$

Select a 02-60 mm angular-contact bearing with $C_{10} = 55.9 \text{ kN}$.

$$R_A = \exp \left\{ - \left[\frac{1440(3.8/55.9)^3 - 0.02}{4.439} \right]^{1.483} \right\} = 0.969$$

For a 03-series straight-roller bearing,

$$C_{10} = 10.279 \left\{ \frac{1440}{0.02 + 4.439[\ln(1/0.95)]^{1/1.483}} \right\}^{3/10} = 105.2 \text{ kN}$$

Select a 03-60 mm straight-roller bearing with $C_{10} = 123 \text{ kN}$.

$$R_B = \exp \left\{ - \left[\frac{1440(10.28/123)^{10/3} - 0.02}{4.439} \right]^{1.483} \right\} = 0.977$$

The overall reliability is $R = 0.969(0.977) = 0.947$, which exceeds the goal. Note, using R_A from this problem, and R_B from Prob. 11-3, $R = 0.969(0.942) = 0.913$, which still exceeds the goal. Likewise, using R_B from this problem, and R_A from Prob. 11-2, $R = 0.927(0.977) = 0.906$.

The point is that the designer has choices. Discover them before making the selection decision. Did the answer to Prob. 11-4 uncover the possibilities?

- 11-6** Choose a 02-series ball bearing from manufacturer #2, having a service factor of 1. For $F_r = 8$ kN and $F_a = 4$ kN

$$x_D = \frac{5000(900)(60)}{10^6} = 270$$

Eq. (11-5):

$$C_{10} = 8 \left\{ \frac{270}{0.02 + 4.439[\ln(1/0.90)]^{1/1.483}} \right\}^{1/3} = 51.8 \text{ kN}$$

Trial #1: From Table (11-2) make a tentative selection of a deep-groove 02-70 mm with $C_0 = 37.5$ kN.

$$\frac{F_a}{C_0} = \frac{4}{37.5} = 0.107$$

Table 11-1:

$$\begin{aligned} F_a/(V F_r) &= 0.5 > e \\ X_2 &= 0.56, \quad Y_2 = 1.46 \end{aligned}$$

Eq. (11-9):

$$F_e = 0.56(1)(8) + 1.46(4) = 10.32 \text{ kN}$$

Eq. (11-6): For $R = 0.90$,

$$C_{10} = 10.32 \left(\frac{270}{1} \right)^{1/3} = 66.7 \text{ kN} > 61.8 \text{ kN}$$

Trial #2: From Table 11-2 choose a 02-80 mm having $C_{10} = 70.2$ and $C_0 = 45.0$.

Check:

$$\frac{F_a}{C_0} = \frac{4}{45} = 0.089$$

Table 11-1: $X_2 = 0.56$, $Y_2 = 1.53$

$$F_e = 0.56(8) + 1.53(4) = 10.60 \text{ kN}$$

Eq. (11-6):

$$C_{10} = 10.60 \left(\frac{270}{1} \right)^{1/3} = 68.51 \text{ kN} < 70.2 \text{ kN}$$

\therefore Selection stands.

Decision: Specify a 02-80 mm deep-groove ball bearing. *Ans.*

11-7 From Prob. 11-6, $x_D = 270$ and the final value of F_e is 10.60 kN.

$$C_{10} = 10.6 \left\{ \frac{270}{0.02 + 4.439[\ln(1/0.96)]^{1/1.483}} \right\}^{1/3} = 84.47 \text{ kN}$$

Table 11-2: Choose a deep-groove ball bearing, based upon C_{10} load ratings.

Trial #1:

Tentatively select a 02-90 mm.

$$C_{10} = 95.6, \quad C_0 = 62 \text{ kN}$$

$$\frac{F_a}{C_0} = \frac{4}{62} = 0.0645$$

From Table 11-1, interpolate for Y_2 .

F_a/C_0	Y_2
0.056	1.71
0.0645	Y_2
0.070	1.63

$$\frac{Y_2 - 1.71}{1.63 - 1.71} = \frac{0.0645 - 0.056}{0.070 - 0.056} = 0.607$$

$$Y_2 = 1.71 + 0.607(1.63 - 1.71) = 1.661$$

$$F_e = 0.56(8) + 1.661(4) = 11.12 \text{ kN}$$

$$C_{10} = 11.12 \left\{ \frac{270}{0.02 + 4.439[\ln(1/0.96)]^{1/1.483}} \right\}^{1/3} = 88.61 \text{ kN} < 95.6 \text{ kN}$$

Bearing is OK.

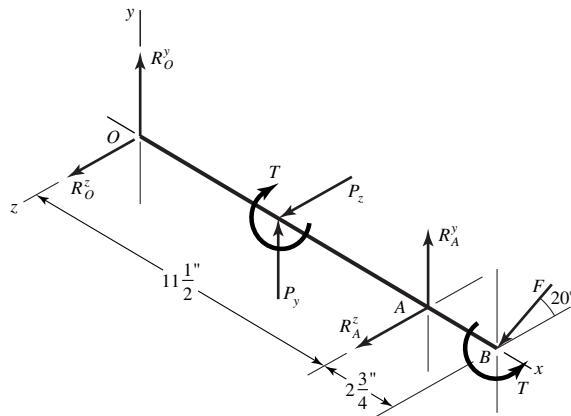
Decision: Specify a deep-groove 02-90 mm ball bearing. *Ans.*

11-8 For the straight cylindrical roller bearing specified with a service factor of 1, $R = 0.90$ and $F_r = 12 \text{ kN}$

$$x_D = \frac{4000(750)(60)}{10^6} = 180$$

$$C_{10} = 12 \left(\frac{180}{1} \right)^{3/10} = 57.0 \text{ kN} \quad \text{Ans.}$$

11-9



Assume concentrated forces as shown.

$$P_z = 8(24) = 192 \text{ lbf}$$

$$P_y = 8(30) = 240 \text{ lbf}$$

$$T = 192(2) = 384 \text{ lbf} \cdot \text{in}$$

$$\sum T^x = -384 + 1.5F \cos 20^\circ = 0$$

$$F = \frac{384}{1.5(0.940)} = 272 \text{ lbf}$$

$$\sum M_O^z = 5.75P_y + 11.5R_A^y - 14.25F \sin 20^\circ = 0;$$

thus $5.75(240) + 11.5R_A^y - 14.25(272)(0.342) = 0$

$$R_A^y = -4.73 \text{ lbf}$$

$$\sum M_O^y = -5.75P_z - 11.5R_A^z - 14.25F \cos 20^\circ = 0;$$

thus $-5.75(192) - 11.5R_A^z - 14.25(272)(0.940) = 0$

$$R_A^z = -413 \text{ lbf}; \quad R_A = [(-413)^2 + (-4.73)^2]^{1/2} = 413 \text{ lbf}$$

$$\sum F^z = R_O^z + P_z + R_A^z + F \cos 20^\circ = 0$$

$$R_O^z + 192 - 413 + 272(0.940) = 0$$

$$R_O^z = -34.7 \text{ lbf}$$

$$\sum F^y = R_O^y + P_y + R_A^y - F \sin 20^\circ = 0$$

$$R_O^y + 240 - 4.73 - 272(0.342) = 0$$

$$R_O^y = -142 \text{ lbf}$$

$$R_O = [(-34.6)^2 + (-142)^2]^{1/2} = 146 \text{ lbf}$$

So the reaction at A governs.

Reliability Goal: $\sqrt{0.92} = 0.96$

$$F_D = 1.2(413) = 496 \text{ lbf}$$

$$x_D = 30\,000(300)(60/10^6) = 540$$

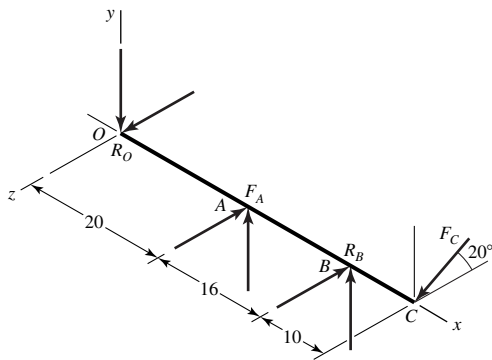
$$C_{10} = 496 \left\{ \frac{540}{0.02 + 4.439[\ln(1/0.96)]^{1/1.483}} \right\}^{1/3}$$

$$= 4980 \text{ lbf} = 22.16 \text{ kN}$$

A 02-35 bearing will do.

Decision: Specify an angular-contact 02-35 mm ball bearing for the locations at A and O. Check combined reliability. *Ans.*

11-10 For a combined reliability goal of 0.90, use $\sqrt{0.90} = 0.95$ for the individual bearings.



$$x_0 = \frac{50\,000(480)(60)}{10^6} = 1440$$

The resultant of the given forces are $R_O = [(-387)^2 + 467^2]^{1/2} = 607 \text{ lbf}$ and $R_B = [316^2 + (-1615)^2]^{1/2} = 1646 \text{ lbf}$.

At O: $F_e = 1.4(607) = 850 \text{ lbf}$

Ball:

$$C_{10} = 850 \left\{ \frac{1440}{0.02 + 4.439[\ln(1/0.95)]^{1/1.483}} \right\}^{1/3}$$

$$= 11\,262 \text{ lbf or } 50.1 \text{ kN}$$

Select a 02-60 mm angular-contact ball bearing with a basic load rating of 55.9 kN. *Ans.*

At B: $F_e = 1.4(1646) = 2304 \text{ lbf}$

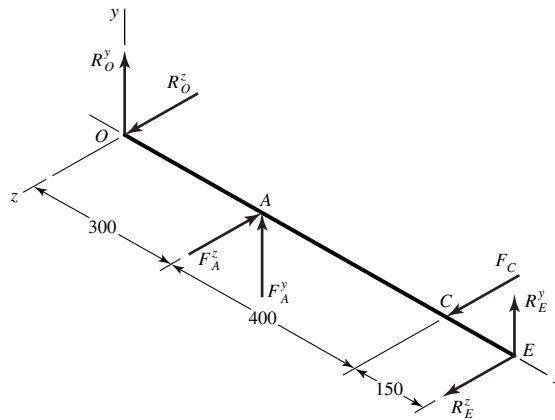
Roller:

$$C_{10} = 2304 \left\{ \frac{1440}{0.02 + 4.439[\ln(1/0.95)]^{1/1.483}} \right\}^{3/10}$$

$$= 23\,576 \text{ lbf or } 104.9 \text{ kN}$$

Select a 02-80 mm cylindrical roller or a 03-60 mm cylindrical roller. The 03-series roller has the same bore as the 02-series ball. *Ans.*

11-11 The reliability of the individual bearings is $R = \sqrt{0.999} = 0.9995$



From statics,

$$R_O^y = -163.4 \text{ N}, \quad R_O^z = 107 \text{ N}, \quad R_O = 195 \text{ N}$$

$$R_E^y = -89.2 \text{ N}, \quad R_E^z = -174.4 \text{ N}, \quad R_E = 196 \text{ N}$$

$$x_D = \frac{60\,000(1200)(60)}{10^6} = 4320$$

$$C_{10} = 0.196 \left\{ \frac{4340}{0.02 + 4.439[\ln(1/0.9995)]^{1/1.483}} \right\}^{1/3}$$

$$= 8.9 \text{ kN}$$

A 02-25 mm deep-groove ball bearing has a basic load rating of 14.0 kN which is ample. An extra-light bearing could also be investigated.

11-12 Given:

$$F_{rA} = 560 \text{ lbf} \quad \text{or} \quad 2.492 \text{ kN}$$

$$F_{rB} = 1095 \text{ lbf} \quad \text{or} \quad 4.873 \text{ kN}$$

Trial #1: Use $K_A = K_B = 1.5$ and from Table 11-6 choose an indirect mounting.

$$\frac{0.47F_{rA}}{K_A} < ? > \frac{0.47F_{rB}}{K_B} - (-1)(0)$$

$$\frac{0.47(2.492)}{1.5} < ? > \frac{0.47(4.873)}{1.5}$$

$0.781 < 1.527$ Therefore use the upper line of Table 11-6.

$$F_{aA} = F_{aB} = \frac{0.47F_{rB}}{K_B} = 1.527 \text{ kN}$$

$$P_A = 0.4F_{rA} + K_A F_{aA} = 0.4(2.492) + 1.5(1.527) = 3.29 \text{ kN}$$

$$P_B = F_{rB} = 4.873 \text{ kN}$$

Fig. 11-16: $f_T = 0.8$

Fig. 11-17: $f_V = 1.07$

Thus, $a_{3l} = f_T f_V = 0.8(1.07) = 0.856$

Individual reliability: $R_i = \sqrt{0.9} = 0.95$

Eq. (11-17):

$$(C_{10})_A = 1.4(3.29) \left[\frac{40\,000(400)(60)}{4.48(0.856)(1 - 0.95)^{2/3}(90)(10^6)} \right]^{0.3}$$

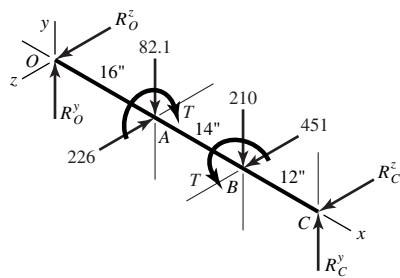
$$= 11.40 \text{ kN}$$

$$(C_{10})_B = 1.4(4.873) \left[\frac{40\,000(400)(60)}{4.48(0.856)(1 - 0.95)^{2/3}(90)(10^6)} \right]^{0.3}$$

$$= 16.88 \text{ kN}$$

From Fig. 11-15, choose cone 32 305 and cup 32 305 which provide $F_r = 17.4 \text{ kN}$ and $K = 1.95$. With $K = 1.95$ for both bearings, a second trial validates the choice of cone 32 305 and cup 32 305. *Ans.*

11-13



$$R = \sqrt{0.95} = 0.975$$

$$T = 240(12)(\cos 20^\circ) = 2706 \text{ lbf} \cdot \text{in}$$

$$F = \frac{2706}{6 \cos 25^\circ} = 498 \text{ lbf}$$

In xy -plane:

$$\sum M_O = -82.1(16) - 210(30) + 42R_C^y = 0$$

$$R_C^y = 181 \text{ lbf}$$

$$R_O^y = 82 + 210 - 181 = 111 \text{ lbf}$$

In xz -plane:

$$\sum M_O = 226(16) - 452(30) - 42R_C^z = 0$$

$$R_C^z = -237 \text{ lbf}$$

$$R_O^z = 226 - 451 + 237 = 12 \text{ lbf}$$

$$R_O = (111^2 + 12^2)^{1/2} = 112 \text{ lbf} \quad \text{Ans.}$$

$$R_C = (181^2 + 237^2)^{1/2} = 298 \text{ lbf} \quad \text{Ans.}$$

$$F_{eO} = 1.2(112) = 134.4 \text{ lbf}$$

$$F_{eC} = 1.2(298) = 357.6 \text{ lbf}$$

$$x_D = \frac{40\,000(200)(60)}{10^6} = 480$$

$$(C_{10})_O = 134.4 \left\{ \frac{480}{0.02 + 4.439[\ln(1/0.975)]^{1/1.483}} \right\}^{1/3}$$

$$= 1438 \text{ lbf} \quad \text{or} \quad 6.398 \text{ kN}$$

$$(C_{10})_C = 357.6 \left\{ \frac{480}{0.02 + 4.439[\ln(1/0.975)]^{1/1.483}} \right\}^{1/3}$$

$$= 3825 \text{ lbf} \quad \text{or} \quad 17.02 \text{ kN}$$

Bearing at O : Choose a deep-groove 02-12 mm. *Ans.*

Bearing at C : Choose a deep-groove 02-30 mm. *Ans.*

There may be an advantage to the identical 02-30 mm bearings in a gear-reduction unit.

- 11-14** Shafts subjected to thrust can be constrained by bearings, one of which supports the thrust. The shaft floats within the endplay of the second (Roller) bearing. Since the thrust force here is larger than any radial load, the bearing absorbing the thrust is heavily loaded compared to the other bearing. The second bearing is thus oversized and does not contribute measurably to the chance of failure. This is predictable. The reliability goal is not $\sqrt{0.99}$, but 0.99 for the ball bearing. The reliability of the roller is 1. Beginning here saves effort.

Bearing at A (Ball)

$$F_r = (36^2 + 212^2)^{1/2} = 215 \text{ lbf} = 0.957 \text{ kN}$$

$$F_a = 555 \text{ lbf} = 2.47 \text{ kN}$$

Trial #1:

Tentatively select a 02-85 mm angular-contact with $C_{10} = 90.4 \text{ kN}$ and $C_0 = 63.0 \text{ kN}$.

$$\frac{F_a}{C_0} = \frac{2.47}{63.0} = 0.0392$$

$$x_D = \frac{25\,000(600)(60)}{10^6} = 900$$

Table 11-1: $X_2 = 0.56$, $Y_2 = 1.88$

$$F_e = 0.56(0.957) + 1.88(2.47) = 5.18 \text{ kN}$$

$$F_D = f_A F_e = 1.3(5.18) = 6.73 \text{ kN}$$

$$C_{10} = 6.73 \left\{ \frac{900}{0.02 + 4.439[\ln(1/0.99)]^{1/1.483}} \right\}^{1/3}$$

$$= 107.7 \text{ kN} > 90.4 \text{ kN}$$

Trial #2:

Tentatively select a 02-95 mm angular-contact ball with $C_{10} = 121 \text{ kN}$ and $C_0 = 85 \text{ kN}$.

$$\frac{F_a}{C_0} = \frac{2.47}{85} = 0.029$$

Table 11-1: $Y_2 = 1.98$

$$F_e = 0.56(0.957) + 1.98(2.47) = 5.43 \text{ kN}$$

$$F_D = 1.3(5.43) = 7.05 \text{ kN}$$

$$C_{10} = 7.05 \left\{ \frac{900}{0.02 + 4.439[\ln(1/0.99)]^{1/1.483}} \right\}^{1/3}$$

$$= 113 \text{ kN} < 121 \text{ kN} \quad O.K.$$

Select a 02-95 mm angular-contact ball bearing. *Ans.*

Bearing at B (Roller): Any bearing will do since $R = 1$. Let's prove it. From Eq. (11-18) when

$$\left(\frac{a_f F_D}{C_{10}} \right)^3 x_D < x_0 \quad R = 1$$

The smallest 02-series roller has a $C_{10} = 16.8 \text{ kN}$ for a basic load rating.

$$\left(\frac{0.427}{16.8} \right)^3 (900) < ? > 0.02$$

$$0.0148 < 0.02 \quad \therefore R = 1$$

Spotting this early avoided rework from $\sqrt{0.99} = 0.995$.

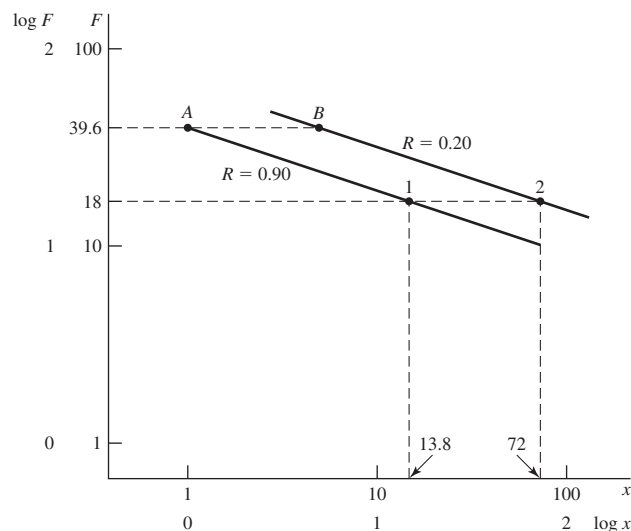
Any 02-series roller bearing will do. Same bore or outside diameter is a common choice. (Why?) *Ans.*

11-15 Hoover Ball-bearing Division uses the same 2-parameter Weibull model as Timken: $b = 1.5, \theta = 4.48$. We have some data. Let's estimate parameters b and θ from it. In Fig. 11-5, we will use line AB . In this case, B is to the right of A .

For $F = 18 \text{ kN}$,

$$(x)_1 = \frac{115(2000)(16)}{10^6} = 13.8$$

This establishes point 1 on the $R = 0.90$ line.



The $R = 0.20$ locus is above and parallel to the $R = 0.90$ locus. For the two-parameter Weibull distribution, $x_0 = 0$ and points A and B are related by [see Eq. (20-25)]:

$$x_A = \theta[\ln(1/0.90)]^{1/b} \quad (1)$$

$$x_B = \theta[\ln(1/0.20)]^{1/b}$$

and x_B/x_A is in the same ratio as 600/115. Eliminating θ

$$b = \frac{\ln[\ln(1/0.20)/\ln(1/0.90)]}{\ln(600/115)} = 1.65 \quad \text{Ans.}$$

Solving for θ in Eq. (1)

$$\theta = \frac{x_A}{[\ln(1/R_A)]^{1/1.65}} = \frac{1}{[\ln(1/0.90)]^{1/1.65}} = 3.91 \quad \text{Ans.}$$

Therefore, for the data at hand,

$$R = \exp\left[-\left(\frac{x}{3.91}\right)^{1.65}\right]$$

Check R at point B : $x_B = (600/115) = 5.217$

$$R = \exp\left[-\left(\frac{5.217}{3.91}\right)^{1.65}\right] = 0.20$$

Note also, for point 2 on the $R = 0.20$ line.

$$\begin{aligned} \log(5.217) - \log(1) &= \log(x_m)_2 - \log(13.8) \\ (x_m)_2 &= 72 \end{aligned}$$

11-16 This problem is rich in useful variations. Here is one.

Decision: Make straight roller bearings identical on a given shaft. Use a reliability goal of $(0.99)^{1/6} = 0.9983$.

Shaft a

$$F_A^r = (239^2 + 111^2)^{1/2} = 264 \text{ lbf} \quad \text{or} \quad 1.175 \text{ kN}$$

$$F_B^r = (502^2 + 1075^2)^{1/2} = 1186 \text{ lbf} \quad \text{or} \quad 5.28 \text{ kN}$$

Thus the bearing at B controls

$$x_D = \frac{10\,000(1200)(60)}{10^6} = 720$$

$$0.02 + 4.439[\ln(1/0.9983)]^{1/1.483} = 0.080\,26$$

$$C_{10} = 1.2(5.2) \left(\frac{720}{0.080\,26}\right)^{0.3} = 97.2 \text{ kN}$$

Select either a 02-80 mm with $C_{10} = 106 \text{ kN}$ or a 03-55 mm with $C_{10} = 102 \text{ kN}$. *Ans.*

Shaft *b*

$$F_C^r = (874^2 + 2274^2)^{1/2} = 2436 \text{ lbf or } 10.84 \text{ kN}$$

$$F_D^r = (393^2 + 657^2)^{1/2} = 766 \text{ lbf or } 3.41 \text{ kN}$$

The bearing at *C* controls

$$x_D = \frac{10\,000(240)(60)}{10^6} = 144$$

$$C_{10} = 1.2(10.84) \left(\frac{144}{0.0826} \right)^{0.3} = 122 \text{ kN}$$

Select either a 02-90 mm with $C_{10} = 142 \text{ kN}$ or a 03-60 mm with $C_{10} = 123 \text{ kN}$. *Ans.*

Shaft *c*

$$F_E^r = (1113^2 + 2385^2)^{1/2} = 2632 \text{ lbf or } 11.71 \text{ kN}$$

$$F_F^r = (417^2 + 895^2)^{1/2} = 987 \text{ lbf or } 4.39 \text{ kN}$$

The bearing at *E* controls

$$x_D = 10\,000(80)(60/10^6) = 48$$

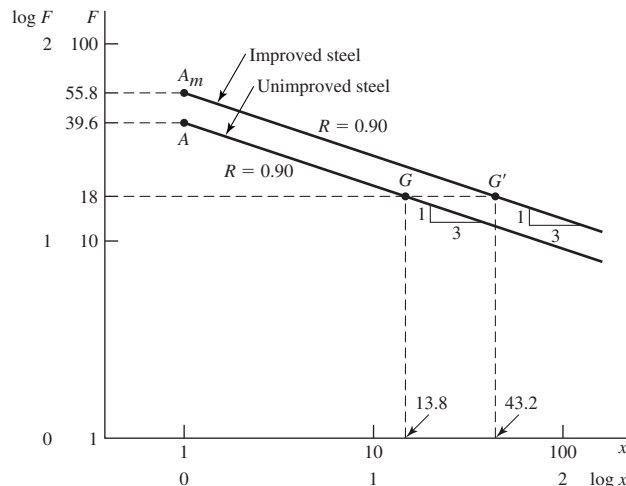
$$C_{10} = 1.2(11.71) \left(\frac{48}{0.0826} \right)^{0.3} = 94.8 \text{ kN}$$

Select a 02-80 mm with $C_{10} = 106 \text{ kN}$ or a 03-60 mm with $C_{10} = 123 \text{ kN}$. *Ans.*

- 11-17** The horizontal separation of the $R = 0.90$ loci in a $\log F$ - $\log x$ plot such as Fig. 11-5 will be demonstrated. We refer to the solution of Prob. 11-15 to plot point G ($F = 18 \text{ kN}$, $x_G = 13.8$). We know that $(C_{10})_1 = 39.6 \text{ kN}$, $x_1 = 1$. This establishes the unimproved steel $R = 0.90$ locus, line AG . For the improved steel

$$(x_m)_1 = \frac{360(2000)(60)}{10^6} = 43.2$$

We plot point G' ($F = 18 \text{ kN}$, $x_{G'} = 43.2$), and draw the $R = 0.90$ locus $A_m G'$ parallel to AG



We can calculate $(C_{10})_m$ by similar triangles.

$$\frac{\log(C_{10})_m - \log 18}{\log 43.2 - \log 1} = \frac{\log 39.6 - \log 18}{\log 13.8 - \log 1}$$

$$\log(C_{10})_m = \frac{\log 43.2}{\log 13.8} \log\left(\frac{39.6}{18}\right) + \log 18$$

$$(C_{10})_m = 55.8 \text{ kN}$$

The usefulness of this plot is evident. The improvement is $43.2/13.8 = 3.13$ fold in life. This result is also available by $(L_{10})_m/(L_{10})_1$ as $360/115$ or 3.13 fold, but the plot shows the improvement is for all loading. Thus, the manufacturer's assertion that there is at least a 3-fold increase in life has been demonstrated by the sample data given. *Ans.*

11-18 Express Eq. (11-1) as

$$F_1^a L_1 = C_{10}^a L_{10} = K$$

For a ball bearing, $a = 3$ and for a 02-30 mm angular contact bearing, $C_{10} = 20.3 \text{ kN}$.

$$K = (20.3)^3(10^6) = 8.365(10^9)$$

At a load of 18 kN, life L_1 is given by:

$$L_1 = \frac{K}{F_1^a} = \frac{8.365(10^9)}{18^3} = 1.434(10^6) \text{ rev}$$

For a load of 30 kN, life L_2 is:

$$L_2 = \frac{8.365(10^9)}{30^3} = 0.310(10^6) \text{ rev}$$

In this case, Eq. (7-57) – the Palmgren-Miner cycle ratio summation rule – can be expressed as

$$\frac{l_1}{L_1} + \frac{l_2}{L_2} = 1$$

Substituting,

$$\frac{200\,000}{1.434(10^6)} + \frac{l_2}{0.310(10^6)} = 1$$

$$l_2 = 0.267(10^6) \text{ rev } \textit{Ans.}$$

11-19 *Total life in revolutions*

Let:

l = total turns

f_1 = fraction of turns at F_1

f_2 = fraction of turns at F_2

From the solution of Prob. 11-18, $L_1 = 1.434(10^6)$ rev and $L_2 = 0.310(10^6)$ rev.

Palmgren-Miner rule:

$$\frac{l_1}{L_1} + \frac{l_2}{L_2} = \frac{f_1 l}{L_1} + \frac{f_2 l}{L_2} = 1$$

from which

$$l = \frac{1}{f_1/L_1 + f_2/L_2}$$

$$l = \frac{1}{\{0.40/[1.434(10^6)]\} + \{0.60/[0.310(10^6)]\}}$$

$$= 451\,585 \text{ rev} \quad \text{Ans.}$$

Total life in loading cycles

$$4 \text{ min at } 2000 \text{ rev/min} = 8000 \text{ rev}$$

$$\frac{6 \text{ min}}{10 \text{ min/cycle}} \text{ at } 2000 \text{ rev/min} = \frac{12\,000 \text{ rev}}{20\,000 \text{ rev/cycle}}$$

$$\frac{451\,585 \text{ rev}}{20\,000 \text{ rev/cycle}} = 22.58 \text{ cycles} \quad \text{Ans.}$$

Total life in hours

$$\left(10 \frac{\text{min}}{\text{cycle}}\right) \left(\frac{22.58 \text{ cycles}}{60 \text{ min/h}}\right) = 3.76 \text{ h} \quad \text{Ans.}$$

11-20 While we made some use of the log F -log x plot in Probs. 11-15 and 11-17, the principal use of Fig. 11-5 is to understand equations (11-6) and (11-7) in the discovery of the catalog basic load rating for a case at hand.

Point D

$$F_D = 495.6 \text{ lbf}$$

$$\log F_D = \log 495.6 = 2.70$$

$$x_D = \frac{30\,000(300)(60)}{10^6} = 540$$

$$\log x_D = \log 540 = 2.73$$

$$K_D = F_D^3 x_D = (495.6)^3 (540)$$

$$= 65.7(10^9) \text{ lbf}^3 \cdot \text{turns}$$

$$\log K_D = \log[65.7(10^9)] = 10.82$$

F_D has the following uses: F_{design} , F_{desired} , F_e when a thrust load is present. It can include application factor a_f , or not. It depends on context.

Point B

$$x_B = 0.02 + 4.439[\ln(1/0.99)]^{1/1.483}$$

$$= 0.220 \text{ turns}$$

$$\log x_B = \log 0.220 = -0.658$$

$$F_B = F_D \left(\frac{x_D}{x_B} \right)^{1/3} = 495.6 \left(\frac{540}{0.220} \right)^{1/3} = 6685 \text{ lbf}$$

Note: Example 11-3 used Eq. (11-7). Whereas, here we basically used Eq. (11-6).

$$\log F_B = \log(6685) = 3.825$$

$$K_D = 6685^3(0.220) = 65.7(10^9) \text{ lbf}^3 \cdot \text{turns} \quad (\text{as it should})$$

Point A

$$F_A = F_B = C_{10} = 6685 \text{ lbf}$$

$$\log C_{10} = \log(6685) = 3.825$$

$$x_A = 1$$

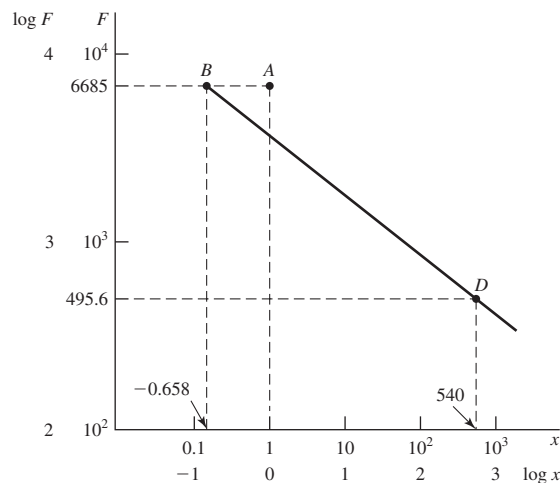
$$\log x_A = \log(1) = 0$$

$$K_{10} = F_A^3 x_A = C_{10}^3(1) = 6685^3 = 299(10^9) \text{ lbf}^3 \cdot \text{turns}$$

Note that $K_D/K_{10} = 65.7(10^9)/[299(10^9)] = 0.220$, which is x_B . This is worth knowing since

$$K_{10} = \frac{K_D}{x_B}$$

$$\log K_{10} = \log[299(10^9)] = 11.48$$



Now $C_{10} = 6685 \text{ lbf} = 29.748 \text{ kN}$, which is required for a reliability goal of 0.99. If we select an angular contact 02-40 mm ball bearing, then $C_{10} = 31.9 \text{ kN} = 7169 \text{ lbf}$.

Chapter 12

12-1 Given $d_{\max} = 1.000$ in and $b_{\min} = 1.0015$ in, the minimum radial clearance is

$$c_{\min} = \frac{b_{\min} - d_{\max}}{2} = \frac{1.0015 - 1.000}{2} = 0.00075 \text{ in}$$

Also

$$l/d = 1$$

$$r \doteq 1.000/2 = 0.500$$

$$r/c = 0.500/0.00075 = 667$$

$$N = 1100/60 = 18.33 \text{ rev/s}$$

$$P = W/(ld) = 250/[(1)(1)] = 250 \text{ psi}$$

Eq. (12-7):
$$S = (667^2) \left[\frac{8(10^{-6})(18.33)}{250} \right] = 0.261$$

Fig. 12-16:
$$h_0/c = 0.595$$

Fig. 12-19:
$$Q/(rcNl) = 3.98$$

Fig. 12-18:
$$fr/c = 5.8$$

Fig. 12-20:
$$Q_s/Q = 0.5$$

$$h_0 = 0.595(0.00075) = 0.000466 \text{ in} \quad \text{Ans.}$$

$$f = \frac{5.8}{r/c} = \frac{5.8}{667} = 0.0087$$

The power loss in Btu/s is

$$H = \frac{2\pi fWrN}{778(12)} = \frac{2\pi(0.0087)(250)(0.5)(18.33)}{778(12)}$$

$$= 0.0134 \text{ Btu/s} \quad \text{Ans.}$$

$$Q = 3.98rcNl = 3.98(0.5)(0.00075)(18.33)(1) = 0.0274 \text{ in}^3/\text{s}$$

$$Q_s = 0.5(0.0274) = 0.0137 \text{ in}^3/\text{s} \quad \text{Ans.}$$

12-2

$$c_{\min} = \frac{b_{\min} - d_{\max}}{2} = \frac{1.252 - 1.250}{2} = 0.001 \text{ in}$$

$$r \doteq 1.25/2 = 0.625 \text{ in}$$

$$r/c = 0.625/0.001 = 625$$

$$N = 1150/60 = 19.167 \text{ rev/s}$$

$$P = \frac{400}{1.25(2.5)} = 128 \text{ psi}$$

$$l/d = 2.5/1.25 = 2$$

$$S = \frac{(625^2)(10)(10^{-6})(19.167)}{128} = 0.585$$

The interpolation formula of Eq. (12-16) will have to be used. From Figs. 12-16, 12-21, and 12-19

$$\text{For } l/d = \infty, \quad h_o/c = 0.96, \quad P/p_{\max} = 0.84, \quad \frac{Q}{rcNl} = 3.09$$

$$l/d = 1, \quad h_o/c = 0.77, \quad P/p_{\max} = 0.52, \quad \frac{Q}{rcNl} = 3.6$$

$$l/d = \frac{1}{2}, \quad h_o/c = 0.54, \quad P/p_{\max} = 0.42, \quad \frac{Q}{rcNl} = 4.4$$

$$l/d = \frac{1}{4}, \quad h_o/c = 0.31, \quad P/p_{\max} = 0.28, \quad \frac{Q}{rcNl} = 5.25$$

Equation (12-16) is easily programmed by code or by using a spreadsheet. The results are:

	l/d	y_{∞}	y_1	$y_{1/2}$	$y_{1/4}$	$y_{l/d}$
h_o/c	2	0.96	0.77	0.54	0.31	0.88
P/p_{\max}	2	0.84	0.52	0.42	0.28	0.64
$Q/rcNl$	2	3.09	3.60	4.40	5.25	3.28

$$\therefore h_o = 0.88(0.001) = 0.00088 \text{ in } \textit{Ans.}$$

$$p_{\max} = \frac{128}{0.64} = 200 \text{ psi } \textit{Ans.}$$

$$Q = 3.28(0.625)(0.001)(19.167)(2.5) = 0.098 \text{ in}^3/\text{s } \textit{Ans.}$$

12-3

$$c_{\min} = \frac{b_{\min} - d_{\max}}{2} = \frac{3.005 - 3.000}{2} = 0.0025 \text{ in}$$

$$r \doteq 3.000/2 = 1.500 \text{ in}$$

$$l/d = 1.5/3 = 0.5$$

$$r/c = 1.5/0.0025 = 600$$

$$N = 600/60 = 10 \text{ rev/s}$$

$$P = \frac{800}{1.5(3)} = 177.78 \text{ psi}$$

Fig. 12-12: SAE 10, $\mu' = 1.75 \mu\text{reyn}$

$$S = (600^2) \left[\frac{1.75(10^{-6})(10)}{177.78} \right] = 0.0354$$

Figs. 12-16 and 12-21: $h_o/c = 0.11, \quad P/p_{\max} = 0.21$

$$h_o = 0.11(0.0025) = 0.000275 \text{ in } \textit{Ans.}$$

$$p_{\max} = 177.78/0.21 = 847 \text{ psi } \textit{Ans.}$$

Fig. 12-12: SAE 40, $\mu' = 4.5 \mu\text{reyn}$

$$S = 0.0354 \left(\frac{4.5}{1.75} \right) = 0.0910$$

$$h_o/c = 0.19, \quad P/p_{\max} = 0.275$$

$$h_o = 0.19(0.0025) = 0.000475 \text{ in } \textit{Ans.}$$

$$p_{\max} = 177.78/0.275 = 646 \text{ psi } \textit{Ans.}$$

12-4

$$c_{\min} = \frac{b_{\min} - d_{\max}}{2} = \frac{3.006 - 3.000}{2} = 0.003$$

$$r \doteq 3.000/2 = 1.5 \text{ in}$$

$$l/d = 1$$

$$r/c = 1.5/0.003 = 500$$

$$N = 750/60 = 12.5 \text{ rev/s}$$

$$P = \frac{600}{3(3)} = 66.7 \text{ psi}$$

Fig. 12-14: SAE 10W, $\mu' = 2.1 \mu\text{reyn}$

$$S = (500^2) \left[\frac{2.1(10^{-6})(12.5)}{66.7} \right] = 0.0984$$

From Figs. 12-16 and 12-21:

$$h_o/c = 0.34, \quad P/p_{\max} = 0.395$$

$$h_o = 0.34(0.003) = 0.001020 \text{ in } \textit{Ans.}$$

$$p_{\max} = \frac{66.7}{0.395} = 169 \text{ psi } \textit{Ans.}$$

Fig. 12-14: SAE 20W-40, $\mu' = 5.05 \mu\text{reyn}$

$$S = (500^2) \left[\frac{5.05(10^{-6})(12.5)}{66.7} \right] = 0.237$$

From Figs. 12-16 and 12-21:

$$h_o/c = 0.57, \quad P/p_{\max} = 0.47$$

$$h_o = 0.57(0.003) = 0.00171 \text{ in } \textit{Ans.}$$

$$p_{\max} = \frac{66.7}{0.47} = 142 \text{ psi } \textit{Ans.}$$

12-5

$$c_{\min} = \frac{b_{\min} - d_{\max}}{2} = \frac{2.0024 - 2}{2} = 0.0012 \text{ in}$$

$$r \doteq \frac{d}{2} = \frac{2}{2} = 1 \text{ in}, \quad l/d = 1/2 = 0.50$$

$$r/c = 1/0.0012 = 833$$

$$N = 800/60 = 13.33 \text{ rev/s}$$

$$P = \frac{600}{2(1)} = 300 \text{ psi}$$

Fig. 12-12: SAE 20, $\mu' = 3.75 \mu\text{reyn}$

$$S = (833^2) \left[\frac{3.75(10^{-6})(13.3)}{300} \right] = 0.115$$

From Figs. 12-16, 12-18 and 12-19:

$$h_o/c = 0.23, \quad rf/c = 3.8, \quad Q/(rcNl) = 5.3$$

$$h_o = 0.23(0.0012) = 0.000276 \text{ in} \quad \text{Ans.}$$

$$f = \frac{3.8}{833} = 0.00456$$

The power loss due to friction is

$$H = \frac{2\pi fWrN}{778(12)} = \frac{2\pi(0.00456)(600)(1)(13.33)}{778(12)}$$

$$= 0.0245 \text{ Btu/s} \quad \text{Ans.}$$

$$Q = 5.3rcNl$$

$$= 5.3(1)(0.0012)(13.33)(1)$$

$$= 0.0848 \text{ in}^3/\text{s} \quad \text{Ans.}$$

12-6

$$c_{\min} = \frac{b_{\min} - d_{\max}}{2} = \frac{25.04 - 25}{2} = 0.02 \text{ mm}$$

$$r \doteq d/2 = 25/2 = 12.5 \text{ mm}, \quad l/d = 1$$

$$r/c = 12.5/0.02 = 625$$

$$N = 1200/60 = 20 \text{ rev/s}$$

$$P = \frac{1250}{25^2} = 2 \text{ MPa}$$

For $\mu = 50 \text{ mPa} \cdot \text{s}$, $S = (625^2) \left[\frac{50(10^{-3})(20)}{2(10^6)} \right] = 0.195$

From Figs. 12-16, 12-18 and 12-20:

$$h_o/c = 0.52, \quad fr/c = 4.5, \quad Q_s/Q = 0.57$$

$$h_o = 0.52(0.02) = 0.0104 \text{ mm} \quad \text{Ans.}$$

$$f = \frac{4.5}{625} = 0.0072$$

$$T = fWr = 0.0072(1.25)(12.5) = 0.1125 \text{ N} \cdot \text{m}$$

The power loss due to friction is

$$H = 2\pi TN = 2\pi(0.1125)(20) = 14.14 \text{ W} \quad \text{Ans.}$$

$$Q_s = 0.57Q \quad \text{The side flow is 57\% of } Q \quad \text{Ans.}$$

12-7

$$c_{\min} = \frac{b_{\min} - d_{\max}}{2} = \frac{30.05 - 30.00}{2} = 0.025 \text{ mm}$$

$$r = \frac{d}{2} = \frac{30}{2} = 15 \text{ mm}$$

$$\frac{r}{c} = \frac{15}{0.025} = 600$$

$$N = \frac{1120}{60} = 18.67 \text{ rev/s}$$

$$P = \frac{2750}{30(50)} = 1.833 \text{ MPa}$$

$$S = (600)^2 \left[\frac{60(10^{-3})(18.67)}{1.833(10^6)} \right] = 0.22$$

$$\frac{l}{d} = \frac{50}{30} = 1.67$$

This l/d requires use of the interpolation of Raimondi and Boyd, Eq. (12-16).

From Fig. 12-16, the h_o/c values are:

$$y_{1/4} = 0.18, \quad y_{1/2} = 0.34, \quad y_1 = 0.54, \quad y_\infty = 0.89$$

Substituting into Eq. (12-16), $\frac{h_o}{c} = 0.659$

From Fig. 12-18, the fr/c values are:

$$y_{1/4} = 7.4, \quad y_{1/2} = 6.0, \quad y_1 = 5.0, \quad y_\infty = 4.0$$

Substituting into Eq. (12-16), $\frac{fr}{c} = 4.59$

From Fig. 12-19, the $Q/(rcNl)$ values are:

$$y_{1/4} = 5.65, \quad y_{1/2} = 5.05, \quad y_1 = 4.05, \quad y_\infty = 2.95$$

Substituting into Eq. (12-16), $\frac{Q}{rcNl} = 3.605$

$$h_o = 0.659(0.025) = 0.0165 \text{ mm} \quad \text{Ans.}$$

$$f = 4.59/600 = 0.00765 \quad \text{Ans.}$$

$$Q = 3.605(15)(0.025)(18.67)(50) = 1263 \text{ mm}^3/\text{s} \quad \text{Ans.}$$

12-8

$$c_{\min} = \frac{b_{\min} - d_{\max}}{2} = \frac{75.10 - 75}{2} = 0.05 \text{ mm}$$

$$l/d = 36/75 \doteq 0.5 \quad (\text{close enough})$$

$$r = d/2 = 75/2 = 37.5 \text{ mm}$$

$$r/c = 37.5/0.05 = 750$$

$$N = 720/60 = 12 \text{ rev/s}$$

$$P = \frac{2000}{75(36)} = 0.741 \text{ MPa}$$

Fig. 12-13: SAE 20, $\mu = 18.5 \text{ mPa} \cdot \text{s}$

$$S = (750^2) \left[\frac{18.5(10^{-3})(12)}{0.741(10^6)} \right] = 0.169$$

From Figures 12-16, 12-18 and 12-21:

$$h_o/c = 0.29, \quad fr/c = 5.1, \quad P/p_{\max} = 0.315$$

$$h_o = 0.29(0.05) = 0.0145 \text{ mm} \quad \text{Ans.}$$

$$f = 5.1/750 = 0.0068$$

$$T = fWr = 0.0068(2)(37.5) = 0.51 \text{ N} \cdot \text{m}$$

The heat loss rate equals the rate of work on the film

$$H_{\text{loss}} = 2\pi TN = 2\pi(0.51)(12) = 38.5 \text{ W} \quad \text{Ans.}$$

$$p_{\max} = 0.741/0.315 = 2.35 \text{ MPa} \quad \text{Ans.}$$

Fig. 12-13: SAE 40, $\mu = 37 \text{ MPa} \cdot \text{s}$

$$S = 0.169(37)/18.5 = 0.338$$

From Figures 12-16, 12-18 and 12-21:

$$h_o/c = 0.42, \quad fr/c = 8.5, \quad P/p_{\max} = 0.38$$

$$h_o = 0.42(0.05) = 0.021 \text{ mm} \quad \text{Ans.}$$

$$f = 8.5/750 = 0.0113$$

$$T = fWr = 0.0113(2)(37.5) = 0.85 \text{ N} \cdot \text{m}$$

$$H_{\text{loss}} = 2\pi TN = 2\pi(0.85)(12) = 64 \text{ W} \quad \text{Ans.}$$

$$p_{\max} = 0.741/0.38 = 1.95 \text{ MPa} \quad \text{Ans.}$$

12-9

$$c_{\min} = \frac{b_{\min} - d_{\max}}{2} = \frac{50.05 - 50}{2} = 0.025 \text{ mm}$$

$$r = d/2 = 50/2 = 25 \text{ mm}$$

$$r/c = 25/0.025 = 1000$$

$$l/d = 25/50 = 0.5, \quad N = 840/60 = 14 \text{ rev/s}$$

$$P = \frac{2000}{25(50)} = 1.6 \text{ MPa}$$

Fig. 12-13: SAE 30, $\mu = 34 \text{ mPa} \cdot \text{s}$

$$S = (1000^2) \left[\frac{34(10^{-3})(14)}{1.6(10^6)} \right] = 0.2975$$

From Figures 12-16, 12-18, 12-19 and 12-20:

$$h_o/c = 0.40, \quad fr/c = 7.8, \quad Q_s/Q = 0.74, \quad Q/(rcNl) = 4.9$$

$$h_o = 0.40(0.025) = 0.010 \text{ mm} \quad \text{Ans.}$$

$$f = 7.8/1000 = 0.0078$$

$$T = fWr = 0.0078(2)(25) = 0.39 \text{ N} \cdot \text{m}$$

$$H = 2\pi TN = 2\pi(0.39)(14) = 34.3 \text{ W} \quad \text{Ans.}$$

$$Q = 4.9rcNl = 4.9(25)(0.025)(14)(25) = 1072 \text{ mm}^2/\text{s}$$

$$Q_s = 0.74(1072) = 793 \text{ mm}^3/\text{s} \quad \text{Ans.}$$

12-10 Consider the bearings as specified by

$$\text{minimum } f: \quad d_{-t_d}^{+0}, \quad b_{-0}^{+t_b}$$

$$\text{maximum } W: \quad d_{-t_d}^{+0}, \quad b_{-0}^{+t_b}$$

and differing only in d and d' .

Preliminaries:

$$l/d = 1$$

$$P = 700/(1.25^2) = 448 \text{ psi}$$

$$N = 3600/60 = 60 \text{ rev/s}$$

Fig. 12-16:

$$\text{minimum } f: \quad S \doteq 0.08$$

$$\text{maximum } W: \quad S \doteq 0.20$$

Fig. 12-12:

$$\mu = 1.38(10^{-6}) \text{ reyn}$$

$$\mu N/P = 1.38(10^{-6})(60/448) = 0.185(10^{-6})$$

Eq. (12-7):

$$\frac{r}{c} = \sqrt{\frac{S}{\mu N/P}}$$

For minimum f :

$$\frac{r}{c} = \sqrt{\frac{0.08}{0.185(10^{-6})}} = 658$$

$$c = 0.625/658 = 0.000950 \doteq 0.001 \text{ in}$$

If this is c_{\min} ,

$$b - d = 2(0.001) = 0.002 \text{ in}$$

The median clearance is

$$\bar{c} = c_{\min} + \frac{t_d + t_b}{2} = 0.001 + \frac{t_d + t_b}{2}$$

and the clearance range for *this* bearing is

$$\Delta c = \frac{t_d + t_b}{2}$$

which is a function only of the tolerances.

For maximum W :

$$\frac{r}{c} = \sqrt{\frac{0.2}{0.185(10^{-6})}} = 1040$$

$$c = 0.625/1040 = 0.000600 \doteq 0.0005 \text{ in}$$

If this is c_{\min}

$$b - d' = 2c_{\min} = 2(0.0005) = 0.001 \text{ in}$$

$$\bar{c} = c_{\min} + \frac{t_d + t_b}{2} = 0.0005 + \frac{t_d + t_b}{2}$$

$$\Delta c = \frac{t_d + t_b}{2}$$

The difference (mean) in clearance between the *two* clearance ranges, c_{range} , is

$$\begin{aligned} c_{\text{range}} &= 0.001 + \frac{t_d + t_b}{2} - \left(0.0005 + \frac{t_d + t_b}{2}\right) \\ &= 0.0005 \text{ in} \end{aligned}$$

For the minimum f bearing

$$b - d = 0.002 \text{ in}$$

or

$$d = b - 0.002 \text{ in}$$

For the maximum W bearing

$$d' = b - 0.001 \text{ in}$$

For the same b , t_b and t_d , we need to change the journal diameter by 0.001 in.

$$\begin{aligned} d' - d &= b - 0.001 - (b - 0.002) \\ &= 0.001 \text{ in} \end{aligned}$$

Increasing d of the minimum friction bearing by 0.001 in, defines d' of the maximum load bearing. Thus, the clearance range provides for bearing dimensions which are attainable in manufacturing. *Ans.*

12-11 Given: SAE 30, $N = 8 \text{ rev/s}$, $T_s = 60^\circ\text{C}$, $l/d = 1$, $d = 80 \text{ mm}$, $b = 80.08 \text{ mm}$, $W = 3000 \text{ N}$

$$c_{\min} = \frac{b_{\min} - d_{\max}}{2} = \frac{80.08 - 80}{2} = 0.04 \text{ mm}$$

$$r = d/2 = 80/2 = 40 \text{ mm}$$

$$\frac{r}{c} = \frac{40}{0.04} = 1000$$

$$P = \frac{3000}{80(80)} = 0.469 \text{ MPa}$$

Trial #1: From Figure 12-13 for $T = 81^\circ\text{C}$, $\mu = 12 \text{ mPa} \cdot \text{s}$

$$\Delta T = 2(81^\circ\text{C} - 60^\circ\text{C}) = 42^\circ\text{C}$$

$$S = (1000^2) \left[\frac{12(10^{-3})(8)}{0.469(10^6)} \right] = 0.2047$$

From Fig. 12-24,

$$\frac{0.120\Delta T}{P} = 0.349 + 6.009(0.2047) + 0.0475(0.2047)^2 = 1.58$$

$$\Delta T = 1.58 \left(\frac{0.469}{0.120} \right) = 6.2^\circ\text{C}$$

Discrepancy = $42^\circ\text{C} - 6.2^\circ\text{C} = 35.8^\circ\text{C}$

Trial #2: From Figure 12-13 for $T = 68^\circ\text{C}$, $\mu = 20 \text{ mPa} \cdot \text{s}$,

$$\Delta T = 2(68^\circ\text{C} - 60^\circ\text{C}) = 16^\circ\text{C}$$

$$S = 0.2047 \left(\frac{20}{12} \right) = 0.341$$

From Fig. 12-24,

$$\frac{0.120\Delta T}{P} = 0.349 + 6.009(0.341) + 0.0475(0.341)^2 = 2.4$$

$$\Delta T = 2.4 \left(\frac{0.469}{0.120} \right) = 9.4^\circ\text{C}$$

Discrepancy = $16^\circ\text{C} - 9.4^\circ\text{C} = 6.6^\circ\text{C}$

Trial #3: $\mu = 21 \text{ mPa} \cdot \text{s}$, $T = 65^\circ\text{C}$

$$\Delta T = 2(65^\circ\text{C} - 60^\circ\text{C}) = 10^\circ\text{C}$$

$$S = 0.2047 \left(\frac{21}{12} \right) = 0.358$$

From Fig. 12-24,

$$\frac{0.120\Delta T}{P} = 0.349 + 6.009(0.358) + 0.0475(0.358)^2 = 2.5$$

$$\Delta T = 2.5 \left(\frac{0.469}{0.120} \right) = 9.8^\circ\text{C}$$

Discrepancy = $10^\circ\text{C} - 9.8^\circ\text{C} = 0.2^\circ\text{C}$ O.K.

$$T_{av} = 65^\circ\text{C} \quad \text{Ans.}$$

$$T_1 = T_{av} - \Delta T/2 = 65^\circ\text{C} - (10^\circ\text{C}/2) = 60^\circ\text{C}$$

$$T_2 = T_{av} + \Delta T/2 = 65^\circ\text{C} + (10^\circ\text{C}/2) = 70^\circ\text{C}$$

$$S = 0.358$$

From Figures 12-16, 12-18, 12-19 and 12-20:

$$\frac{h_o}{c} = 0.68, \quad fr/c = 7.5, \quad \frac{Q}{rcNl} = 3.8, \quad \frac{Q_s}{Q} = 0.44$$

$$h_o = 0.68(0.04) = 0.0272 \text{ mm} \quad \text{Ans.}$$

$$f = \frac{7.5}{1000} = 0.0075$$

$$T = fWr = 0.0075(3)(40) = 0.9 \text{ N} \cdot \text{m}$$

$$H = 2\pi TN = 2\pi(0.9)(8) = 45.2 \text{ W} \quad \text{Ans.}$$

$$Q = 3.8(40)(0.04)(8)(80) = 3891 \text{ mm}^3/\text{s}$$

$$Q_s = 0.44(3891) = 1712 \text{ mm}^3/\text{s} \quad \text{Ans.}$$

12-12 Given: $d = 2.5$ in, $b = 2.504$ in, $c_{\min} = 0.002$ in, $W = 1200$ lbf, SAE = 20, $T_s = 110^\circ\text{F}$, $N = 1120$ rev/min, and $l = 2.5$ in.

For a trial film temperature $T_f = 150^\circ\text{F}$

T_f	μ'	S	ΔT (From Fig. 12-24)
150	2.421	0.0921	18.5

$$T_{av} = T_s + \frac{\Delta T}{2} = 110^\circ\text{F} + \frac{18.5^\circ\text{F}}{2} = 119.3^\circ\text{F}$$

$$T_f - T_{av} = 150^\circ\text{F} - 119.3^\circ\text{F}$$

which is not 0.1 or less, therefore try averaging

$$(T_f)_{\text{new}} = \frac{150^\circ\text{F} + 119.3^\circ\text{F}}{2} = 134.6^\circ\text{F}$$

Proceed with additional trials

Trial	μ'	S	ΔT	T_{av}	New T_f
150.0	2.421	0.0921	18.5	119.3	134.6
134.6	3.453	0.1310	23.1	121.5	128.1
128.1	4.070	0.1550	25.8	122.9	125.5
125.5	4.255	0.1650	27.0	123.5	124.5
124.5	4.471	0.1700	27.5	123.8	124.1
124.1	4.515	0.1710	27.7	123.9	124.0
124.0	4.532	0.1720	27.8	123.7	123.9

Note that the convergence begins rapidly. There are ways to speed this, but at this point they would only add complexity. Depending where you stop, you can enter the analysis.

(a) $\mu = 4.541(10^{-6})$ reyn, $S = 0.1724$

From Fig. 12-16: $\frac{h_o}{c} = 0.482$, $h_o = 0.482(0.002) = 0.000964$ in

From Fig. 12-17: $\phi = 56^\circ$ Ans.

(b) $e = c - h_o = 0.002 - 0.000964 = 0.00104$ in Ans.

(c) From Fig. 12-18: $\frac{fr}{c} = 4.10$, $f = 4.10(0.002/1.25) = 0.00656$ Ans.

(d) $T = fWr = 0.00656(1200)(1.25) = 9.84$ lbf · in

$$H = \frac{2\pi TN}{778(12)} = \frac{2\pi(9.84)(1120/60)}{778(12)} = 0.124 \text{ Btu/s Ans.}$$

(e) From Fig. 12-19: $\frac{Q}{rcNl} = 4.16$, $Q = 4.16(1.25)(0.002) \left(\frac{1120}{60}\right)(2.5)$
 $= 0.485 \text{ in}^3/\text{s}$ Ans.

From Fig. 12-20: $\frac{Q_s}{Q} = 0.6$, $Q_s = 0.6(0.485) = 0.291 \text{ in}^3/\text{s}$ Ans.

(f) From Fig. 12-21: $\frac{P}{p_{\max}} = 0.45$, $p_{\max} = \frac{1200}{2.5^2(0.45)} = 427$ psi Ans.

$$\phi_{p_{\max}} = 16^\circ \text{ Ans.}$$

(g) $\phi_{p_0} = 82^\circ$ Ans.

(h) $T_f = 123.9^\circ\text{F}$ Ans.

(i) $T_s + \Delta T = 110^\circ\text{F} + 27.8^\circ\text{F} = 137.8^\circ\text{F}$ Ans.

12-13 Given: $d = 1.250$ in, $t_d = 0.001$ in, $b = 1.252$ in, $t_b = 0.003$ in, $l = 1.25$ in, $W = 250$ lbf, $N = 1750$ rev/min, SAE 10 lubricant, sump temperature $T_s = 120^\circ\text{F}$.

Below is a partial tabular summary for comparison purposes.

	c_{\min} 0.001 in	\bar{c} 0.002 in	c_{\max} 0.003 in
T_f	132.2	125.8	124.0
ΔT	24.3	11.5	7.96
T_{\max}	144.3	131.5	128.0
μ'	2.587	3.014	3.150
S	0.184	0.0537	0.0249
ϵ	0.499	0.7750	0.873
$\frac{fr}{c}$	4.317	1.881	1.243
$\frac{Q}{rcN_jl}$	4.129	4.572	4.691
$\frac{Q_s}{Q}$	0.582	0.824	0.903
$\frac{h_o}{c}$	0.501	0.225	0.127
f	0.0069	0.006	0.0059
Q	0.0941	0.208	0.321
Q_s	0.0548	0.172	0.290
h_o	0.000501	0.000495	0.000382

Note the variations on each line. There is *not* a bearing, but an ensemble of many bearings, due to the random assembly of toleranced bushings and journals. Fortunately the distribution is bounded; the extreme cases, c_{\min} and c_{\max} , coupled with \bar{c} provide the characteristic description for the designer. All assemblies must be satisfactory.

The designer does not specify a journal-bushing bearing, but an ensemble of bearings.

12-14 Computer programs will vary—Fortran based, MATLAB, spreadsheet, etc.

12-15 In a step-by-step fashion, we are building a skill for natural circulation bearings.

- Given the average film temperature, establish the bearing properties.
- Given a sump temperature, find the average film temperature, then establish the bearing properties.
- Now we acknowledge the environmental temperature's role in establishing the sump temperature. Sec. 12-9 and Ex. 12-5 address this problem.

The task is to iteratively find the average film temperature, T_f , which makes H_{gen} and H_{loss} equal. The steps for determining c_{\min} are provided within Trial #1 through Trial #3 on the following page.

Trial #1:

- Choose a value of T_f .
- Find the corresponding viscosity.
- Find the Sommerfeld number.
- Find fr/c , then

$$H_{\text{gen}} = \frac{2545}{1050} W N c \left(\frac{fr}{c} \right)$$

- Find $Q/(rcNl)$ and Q_s/Q . From Eq. (12-15)

$$\Delta T = \frac{0.103 P (fr/c)}{(1 - 0.5 Q_s/Q) [Q/(rcN;l)]}$$

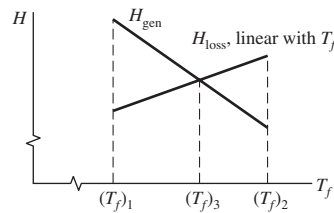
$$H_{\text{loss}} = \frac{\dot{h}_{\text{CR}} A (T_f - T_\infty)}{1 + \alpha}$$

- Display T_f , S , H_{gen} , H_{loss}

Trial #2: Choose another T_f , repeating above drill.

Trial #3:

Plot the results of the first two trials.



Choose $(T_f)_3$ from plot. Repeat the drill. Plot the results of Trial #3 on the above graph. If you are not within 0.1°F , iterate again. Otherwise, stop, and find all the properties of the bearing for the first clearance, c_{min} . See if Trumpler conditions are satisfied, and if so, analyze \bar{c} and c_{max} .

The bearing ensemble in the current problem statement meets Trumpler's criteria (for $n_d = 2$).

This adequacy assessment protocol can be used as a design tool by giving the students additional possible bushing sizes.

b (in)	t_b (in)
2.254	0.004
2.004	0.004
1.753	0.003

Otherwise, the design option includes reducing l/d to save on the cost of journal machining and vendor-supplied bushings.

12-16 Continue to build a skill with pressure-fed bearings, that of finding the average temperature of the fluid film. First examine the case for $c = c_{\min}$

Trial #1:

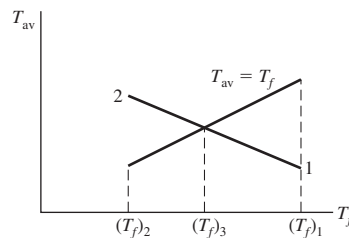
- Choose an initial T_f .
- Find the viscosity.
- Find the Sommerfeld number.
- Find fr/c , h_o/c , and ϵ .
- From Eq. (12-24), find ΔT .

$$T_{av} = T_s + \frac{\Delta T}{2}$$

- Display T_f , S , ΔT , and T_{av} .

Trial #2:

- Choose another T_f . Repeat the drill, and display the second set of values for T_f , S , ΔT , and T_{av} .
- Plot T_{av} vs T_f :



Trial #3:

Pick the third T_f from the plot and repeat the procedure. If $(T_f)_3$ and $(T_{av})_3$ differ by more than 0.1°F , plot the results for Trials #2 and #3 and try again. If they are within 0.1°F , determine the bearing parameters, check the Trumpler criteria, and compare H_{loss} with the lubricant's cooling capacity.

Repeat the entire procedure for $c = c_{\max}$ to assess the cooling capacity for the maximum radial clearance. Finally, examine $c = \bar{c}$ to characterize the ensemble of bearings.

12-17 An adequacy assessment associated with a design task is required. Trumpler's criteria will do.

$$d = 50.00_{-0.05}^{+0.00} \text{ mm}, \quad b = 50.084_{-0.000}^{+0.010} \text{ mm}$$

$$\text{SAE 30}, \quad N = 2880 \text{ rev/min or } 48 \text{ rev/s}, \quad W = 10 \text{ kN}$$

$$c_{\min} = \frac{b_{\min} - d_{\max}}{2} = \frac{50.084 - 50}{2} = 0.042 \text{ mm}$$

$$r = d/2 = 50/2 = 25 \text{ mm}$$

$$r/c = 25/0.042 = 595$$

$$l' = \frac{1}{2}(55 - 5) = 25 \text{ mm}$$

$$l'/d = 25/50 = 0.5$$

$$p = \frac{W}{4rl'} = \frac{10(10^6)}{4(0.25)(0.25)} = 4000 \text{ kPa}$$

Trial #1: Choose $(T_f)_1 = 79^\circ\text{C}$. From Fig. 12-13, $\mu = 13 \text{ mPa} \cdot \text{s}$.

$$S = (595^2) \left[\frac{13(10^{-3})(48)}{4000(10^3)} \right] = 0.055$$

From Figs. 12-18 and 12-16: $\frac{fr}{c} = 2.3$, $\epsilon = 0.85$.

$$\begin{aligned} \text{From Eq. (12-25), } \Delta T &= \frac{978(10^6)}{1 + 1.5\epsilon^2} \frac{(fr/c)SW^2}{p_s r^4} \\ &= \frac{978(10^6)}{1 + 1.5(0.85)^2} \left[\frac{2.3(0.055)(10^2)}{200(25)^4} \right] \\ &= 76.0^\circ\text{C} \end{aligned}$$

$$T_{av} = T_s + \Delta T/2 = 55^\circ\text{C} + (76^\circ\text{C}/2) = 93^\circ\text{C}$$

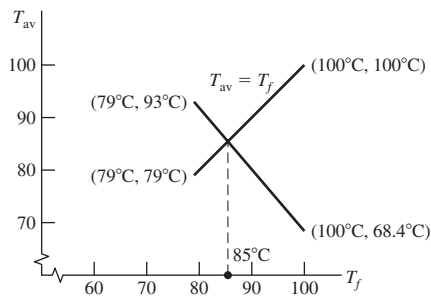
Trial #2: Choose $(T_f)_2 = 100^\circ\text{C}$. From Fig. 12-13, $\mu = 7 \text{ mPa} \cdot \text{s}$.

$$S = 0.055 \left(\frac{7}{13} \right) = 0.0296$$

From Figs. 12-18 and 12-16: $\frac{fr}{c} = 1.6$, $\epsilon = 0.90$

$$\Delta T = \frac{978(10^6)}{1 + 1.5(0.9)^2} \left[\frac{1.6(0.0296)(10^2)}{200(25)^4} \right] = 26.8^\circ\text{C}$$

$$T_{av} = 55^\circ\text{C} + \frac{26.8^\circ\text{C}}{2} = 68.4^\circ\text{C}$$



Trial #3: Thus, the plot gives $(T_f)_3 = 85^\circ\text{C}$. From Fig. 12-13, $\mu = 10.8 \text{ mPa} \cdot \text{s}$.

$$S = 0.055 \left(\frac{10.8}{13} \right) = 0.0457$$

From Figs. 12-18 and 12-16: $\frac{fr}{c} = 2.2$, $\epsilon = 0.875$

$$\Delta T = \frac{978(10^6)}{1 + 1.5(0.875^2)} \left[\frac{2.2(0.0457)(10^2)}{200(25)^4} \right] = 58.6^\circ\text{C}$$

$$T_{av} = 55^\circ\text{C} + \frac{58.6^\circ\text{C}}{2} = 84.3^\circ\text{C}$$

Result is close. Choose $\bar{T}_f = \frac{85^\circ\text{C} + 84.3^\circ\text{C}}{2} = 84.7^\circ\text{C}$

Fig. 12-13:

$$\mu = 10.8 \text{ MPa} \cdot \text{s}$$

$$S = 0.055 \left(\frac{10.8}{13} \right) = 0.0457$$

$$\frac{fr}{c} = 2.23, \quad \epsilon = 0.874, \quad \frac{h_o}{c} = 0.13$$

$$\Delta T = \frac{978(10^6)}{1 + 1.5(0.874^2)} \left[\frac{2.23(0.0457)(10^2)}{200(25^4)} \right] = 59.5^\circ\text{C}$$

$$T_{av} = 55^\circ\text{C} + \frac{59.5^\circ\text{C}}{2} = 84.7^\circ\text{C} \quad \text{O.K.}$$

From Eq. (12-22)

$$\begin{aligned} Q_s &= (1 + 1.5\epsilon^2) \frac{\pi p_s r c^3}{3\mu l'} \\ &= [1 + 1.5(0.874^2)] \left[\frac{\pi(200)(0.042^3)(25)}{3(10)(10^{-6})(25)} \right] \\ &= 3334 \text{ mm}^3/\text{s} \end{aligned}$$

$$h_o = 0.13(0.042) = 0.00546 \text{ mm} \quad \text{or} \quad 0.000215 \text{ in}$$

Trumpler:

$$\begin{aligned} h_o &= 0.0002 + 0.00004(50/25.4) \\ &= 0.000279 \text{ in} \quad \text{Not O.K.} \end{aligned}$$

$$T_{\max} = T_s + \Delta T = 55^\circ\text{C} + 63.7^\circ\text{C} = 118.7^\circ\text{C} \quad \text{or} \quad 245.7^\circ\text{F} \quad \text{O.K.}$$

$$P_{st} = 4000 \text{ kPa} \quad \text{or} \quad 581 \text{ psi} \quad \text{Not O.K.}$$

$$n = 1, \text{ as done} \quad \text{Not O.K.}$$

There is no point in proceeding further.

12-18 So far, we've performed elements of the design task. Now let's do it more completely. First, remember our viewpoint.

The values of the unilateral tolerances, t_b and t_d , reflect the routine capabilities of the bushing vendor and the in-house capabilities. While the designer has to live with these, his approach should not depend on them. They can be incorporated later.

First we shall find the minimum size of the journal which satisfies Trumpler's constraint of $P_{st} \leq 300$ psi.

$$P_{st} = \frac{W}{2dl'} \leq 300$$

$$\frac{W}{2d^2 l'/d} \leq 300 \quad \Rightarrow \quad d \geq \sqrt{\frac{W}{600(l'/d)}}$$

$$d_{\min} = \sqrt{\frac{900}{2(300)(0.5)}} = 1.73 \text{ in}$$

In this problem we will take journal diameter as the nominal value and the bushing bore as a variable. In the next problem, we will take the bushing bore as nominal and the journal diameter as free.

To determine where the constraints are, we will set $t_b = t_d = 0$, and thereby shrink the design window to a point.

We set $d = 2.000$ in

$$b = d + 2c_{\min} = d + 2c$$

$$n_d = 2 \quad (\text{This makes Trumpler's } n_d \leq 2 \text{ tight})$$

and construct a table.

c	b	d	\bar{T}_f^*	T_{\max}	h_o	P_{st}	T_{\max}	n	fom
0.0010	2.0020	2	215.50	312.0	×	✓	×	✓	-5.74
0.0011	2.0022	2	206.75	293.0	×	✓	✓	✓	-6.06
0.0012	2.0024	2	198.50	277.0	×	✓	✓	✓	-6.37
0.0013	2.0026	2	191.40	262.8	×	✓	✓	✓	-6.66
0.0014	2.0028	2	185.23	250.4	×	✓	✓	✓	-6.94
0.0015	2.0030	2	179.80	239.6	×	✓	✓	✓	-7.20
0.0016	2.0032	2	175.00	230.1	×	✓	✓	✓	-7.45
0.0017	2.0034	2	171.13	220.3	×	✓	✓	✓	-7.65
0.0018	2.0036	2	166.92	213.9	✓	✓	✓	✓	-7.91
0.0019	2.0038	2	163.50	206.9	✓	✓	✓	✓	-8.12
0.0020	2.0040	2	160.40	200.6	✓	✓	✓	✓	-8.32

*Sample calculation for the first entry of this column.

Iteration yields: $\bar{T}_f = 215.5^\circ\text{F}$

With $\bar{T}_f = 215.5^\circ\text{F}$, from Table 12-1

$$\mu = 0.0136(10^{-6}) \exp[1271.6/(215.5 + 95)] = 0.817(10^{-6}) \text{ reyn}$$

$$N = 3000/60 = 50 \text{ rev/s}, \quad P = \frac{900}{4} = 225 \text{ psi}$$

$$S = \left(\frac{1}{0.001} \right)^2 \left[\frac{0.817(10^{-6})(50)}{225} \right] = 0.182$$

From Figs. 12-16 and 12-18: $\epsilon = 0.7$, $fr/c = 5.5$

Eq. (12-24):

$$\Delta T_F = \frac{0.0123(5.5)(0.182)(900^2)}{[1 + 1.5(0.7^2)](30)(1^4)} = 191.6^\circ\text{F}$$

$$T_{av} = 120^\circ\text{F} + \frac{191.6^\circ\text{F}}{2} = 215.8^\circ\text{F} \doteq 215.5^\circ\text{F}$$

For the nominal 2-in bearing, the various clearances show that we have been in contact with the recurving of $(h_o)_{\min}$. The figure of merit (the parasitic friction torque plus the pumping torque negated) is best at $c = 0.0018$ in. For the nominal 2-in bearing, we will place the top of the design window at $c_{\min} = 0.002$ in, and $b = d + 2(0.002) = 2.004$ in. At this point, add the b and d unilateral tolerances:

$$d = 2.000_{-0.001}^{+0.000} \text{ in}, \quad b = 2.004_{-0.000}^{+0.003} \text{ in}$$

Now we can check the performance at c_{\min} , \bar{c} , and c_{\max} . Of immediate interest is the fom of the median clearance assembly, -9.82 , as compared to any other satisfactory bearing ensemble.

If a nominal 1.875 in bearing is possible, construct another table with $t_b = 0$ and $t_d = 0$.

c	b	d	\bar{T}_f	T_{\max}	h_o	P_{st}	T_{\max}	fos	fom
0.0020	1.879	1.875	157.2	194.30	×	✓	✓	✓	-7.36
0.0030	1.881	1.875	138.6	157.10	✓	✓	✓	✓	-8.64
0.0035	1.882	1.875	133.5	147.10	✓	✓	✓	✓	-9.05
0.0040	1.883	1.875	130.0	140.10	✓	✓	✓	✓	-9.32
0.0050	1.885	1.875	125.7	131.45	✓	✓	✓	✓	-9.59
0.0055	1.886	1.875	124.4	128.80	✓	✓	✓	✓	-9.63
0.0060	1.887	1.875	123.4	126.80	×	✓	✓	✓	-9.64

The range of clearance is $0.0030 < c < 0.0055$ in. That is enough room to fit in our design window.

$$d = 1.875_{-0.001}^{+0.000} \text{ in}, \quad b = 1.881_{-0.000}^{+0.003} \text{ in}$$

The ensemble median assembly has $\text{fom} = -9.31$.

We just had room to fit in a design window based upon the $(h_o)_{\min}$ constraint. Further reduction in nominal diameter will preclude any smaller bearings. A table constructed for a $d = 1.750$ in journal will prove this.

We choose the nominal 1.875-in bearing ensemble because it has the largest figure of merit. *Ans.*

12-19 This is the same as Prob. 12-18 but uses design variables of nominal bushing bore b and radial clearance c .

The approach is similar to that of Prob. 12-18 and the tables will change slightly. In the table for a nominal $b = 1.875$ in, note that at $c = 0.003$ the constraints are "loose." Set

$$b = 1.875 \text{ in}$$

$$d = 1.875 - 2(0.003) = 1.869 \text{ in}$$

For the ensemble

$$b = 1.875_{-0.001}^{+0.003}, \quad d = 1.869_{-0.001}^{+0.000}$$

Analyze at $c_{\min} = 0.003$, $\bar{c} = 0.004$ in and $c_{\max} = 0.005$ in

At $c_{\min} = 0.003$ in: $\bar{T}_f = 138.4^\circ\text{F}$, $\mu' = 3.160$, $S = 0.0297$, $H_{\text{loss}} = 1035$ Btu/h and the Trumpler conditions are met.

At $\bar{c} = 0.004$ in: $\bar{T}_f = 130^\circ\text{F}$, $\mu' = 3.872$, $S = 0.0205$, $H_{\text{loss}} = 1106$ Btu/h, $\text{fom} = -9.246$ and the Trumpler conditions are *O.K.*

At $c_{\max} = 0.005$ in: $\bar{T}_f = 125.68^\circ\text{F}$, $\mu' = 4.325 \mu\text{reyn}$, $S = 0.01466$, $H_{\text{loss}} = 1129$ Btu/h and the Trumpler conditions are *O.K.*

The ensemble figure of merit is slightly better; this bearing is *slightly* smaller. The lubricant cooler has sufficient capacity.

12-20 From Table 12-1, Seireg and Dandage, $\mu_0 = 0.0141(10^6)$ reyn and $b = 1360.0$

$$\mu(\mu\text{reyn}) = 0.0141 \exp[1360/(T + 95)] \quad (T \text{ in } ^\circ\text{F})$$

$$= 0.0141 \exp[1360/(1.8C + 127)] \quad (C \text{ in } ^\circ\text{C})$$

$$\mu(\text{mPa} \cdot \text{s}) = 6.89(0.0141) \exp[1360/(1.8C + 127)] \quad (C \text{ in } ^\circ\text{C})$$

For SAE 30 at 79°C

$$\mu = 6.89(0.0141) \exp\{1360/[1.8(79) + 127]\}$$

$$= 15.2 \text{ mPa} \cdot \text{s} \quad \text{Ans.}$$

12-21 Originally

$$d = 2.000_{-0.001}^{+0.000} \text{ in}, \quad b = 2.005_{-0.000}^{+0.003} \text{ in}$$

Doubled,

$$d = 4.000_{-0.002}^{+0.000} \text{ in}, \quad b = 4.010_{-0.000}^{+0.006}$$

The radial load quadrupled to 3600 lbf when the analyses for parts (a) and (b) were carried out. Some of the results are:

Part	\bar{c}	μ'	S	\bar{T}_f	fr/c	Q_s	h_o/c	ϵ	H_{loss}	h_o	Trumpler h_o	f
(a)	0.007	3.416	0.0310	135.1	0.1612	6.56	0.1032	0.897	9898	0.000722	0.000360	0.00567
(b)	0.0035	3.416	0.0310	135.1	0.1612	0.870	0.1032	0.897	1237	0.000361	0.000280	0.00567

The side flow Q_s differs because there is a c^3 term and consequently an 8-fold increase. H_{loss} is related by a 9898/1237 or an 8-fold increase. The existing h_o is related by a 2-fold increase. Trumpler's $(h_o)_{\text{min}}$ is related by a 1.286-fold increase

$$\left. \begin{aligned} \text{fom} &= -82.37 && \text{for double size} \\ \text{fom} &= -10.297 && \text{for original size} \end{aligned} \right\} \text{an 8-fold increase for double-size}$$

12-22 From Table 12-8: $K = 0.6(10^{-10}) \text{ in}^3 \cdot \text{min}/(\text{lbf} \cdot \text{ft} \cdot \text{h})$. $P = 500/[(1)(1)] = 500 \text{ psi}$,
 $V = \pi DN/12 = \pi(1)(200)/12 = 52.4 \text{ ft/min}$

Tables 12-10 and 12-11: $f_1 = 1.8, \quad f_2 = 1$

Table 12-12: $PV_{\text{max}} = 46\,700 \text{ psi} \cdot \text{ft/min}, \quad P_{\text{max}} = 3560 \text{ psi}, \quad V_{\text{max}} = 100 \text{ ft/min}$

$$P_{\text{max}} = \frac{4F}{\pi DL} = \frac{4(500)}{\pi(1)(1)} = 637 \text{ psi} < 3560 \text{ psi} \quad \text{O.K.}$$

$$P = \frac{F}{DL} = 500 \text{ psi} \quad V = 52.4 \text{ ft/min}$$

$$PV = 500(52.4) = 26\,200 \text{ psi} \cdot \text{ft/min} < 46\,700 \text{ psi} \cdot \text{ft/min} \quad \text{O.K.}$$

Solving Eq. (12-32) for t

$$t = \frac{\pi DLw}{4f_1 f_2 KVF} = \frac{\pi(1)(1)(0.005)}{4(1.8)(1)(0.6)(10^{-10})(52.4)(500)} = 1388 \text{ h} = 83\,270 \text{ min}$$

$$\text{Cycles} = Nt = 200(83\,270) = 16.7 \text{ rev} \quad \text{Ans.}$$

12-23 Estimate bushing length with $f_1 = f_2 = 1$, and $K = 0.6(10^{-10}) \text{ in}^3 \cdot \text{min}/(\text{lbf} \cdot \text{ft} \cdot \text{h})$

$$\text{Eq. (12-32):} \quad L = \frac{1(1)(0.6)(10^{-10})(2)(100)(400)(1000)}{3(0.002)} = 0.80 \text{ in}$$

From Eq. (12-38), with $f_s = 0.03$ from Table 12-9 applying $n_d = 2$ to F and $h_{CR} = 2.7 \text{ Btu}/(\text{h} \cdot \text{ft}^2 \cdot ^\circ\text{F})$

$$L \doteq \frac{720(0.03)(2)(100)(400)}{778(2.7)(300 - 70)} = 3.58 \text{ in}$$

$$0.80 \leq L \leq 3.58 \text{ in}$$

Trial 1: Let $L = 1 \text{ in}$, $D = 1 \text{ in}$

$$P_{\max} = \frac{4(2)(100)}{\pi(1)(1)} = 255 \text{ psi} < 3560 \text{ psi} \quad \text{O.K.}$$

$$P = \frac{2(100)}{1(1)} = 200 \text{ psi}$$

$$V = \frac{\pi(1)(400)}{12} = 104.7 \text{ ft/min} > 100 \text{ ft/min} \quad \text{Not O.K.}$$

Trial 2: Try $D = 7/8 \text{ in}$, $L = 1 \text{ in}$

$$P_{\max} = \frac{4(2)(100)}{\pi(7/8)(1)} = 291 \text{ psi} < 3560 \text{ psi} \quad \text{O.K.}$$

$$P = \frac{2(100)}{7/8(1)} = 229 \text{ psi}$$

$$V = \frac{\pi(7/8)(400)}{12} = 91.6 \text{ ft/min} < 100 \text{ ft/min} \quad \text{O.K.}$$

$$PV = 229(91.6) = 20\,976 \text{ psi} \cdot \text{ft/min} < 46\,700 \text{ psi} \cdot \text{ft/min} \quad \text{O.K.}$$

V	f_1
33	1.3
91.6	f_1
100	1.8

$$\Rightarrow f_1 = 1.3 + (1.8 - 1.3) \left(\frac{91.6 - 33}{100 - 33} \right) = 1.74$$

$$L = 0.80(1.74) = 1.39 \text{ in}$$

Trial 3: Try $D = 7/8$ in, $L = 1.5$ in

$$P_{\max} = \frac{4(2)(100)}{\pi(7/8)(1.5)} = 194 \text{ psi} < 3560 \text{ psi} \quad O.K.$$

$$P = \frac{2(100)}{7/8(1.5)} = 152 \text{ psi}, \quad V = 91.6 \text{ ft/min}$$

$$PV = 152(91.6) = 13\,923 \text{ psi} \cdot \text{ft/min} < 46\,700 \text{ psi} \cdot \text{ft/min} \quad O.K.$$

$$D = 7/8 \text{ in}, \quad L = 1.5 \text{ in} \quad \text{is acceptable} \quad \textit{Ans.}$$

Suggestion: Try smaller sizes.

Chapter 13

13-1

$$d_P = 17/8 = 2.125 \text{ in}$$

$$d_G = \frac{N_2}{N_3} d_P = \frac{1120}{544} (2.125) = 4.375 \text{ in}$$

$$N_G = P d_G = 8(4.375) = 35 \text{ teeth } \textit{Ans.}$$

$$C = (2.125 + 4.375)/2 = 3.25 \text{ in } \textit{Ans.}$$

13-2

$$n_G = 1600(15/60) = 400 \text{ rev/min } \textit{Ans.}$$

$$p = m = 3 \text{ mm } \textit{Ans.}$$

$$C = [3(15 + 60)]/2 = 112.5 \text{ mm } \textit{Ans.}$$

13-3

$$N_G = 20(2.80) = 56 \text{ teeth } \textit{Ans.}$$

$$d_G = N_G m = 56(4) = 224 \text{ mm } \textit{Ans.}$$

$$d_P = N_P m = 20(4) = 80 \text{ mm } \textit{Ans.}$$

$$C = (224 + 80)/2 = 152 \text{ mm } \textit{Ans.}$$

13-4 *Mesh:*

$$a = 1/P = 1/3 = 0.3333 \text{ in } \textit{Ans.}$$

$$b = 1.25/P = 1.25/3 = 0.4167 \text{ in } \textit{Ans.}$$

$$c = b - a = 0.0834 \text{ in } \textit{Ans.}$$

$$p = 1/P = 1/3 = 1.047 \text{ in } \textit{Ans.}$$

$$t = p/2 = 1.047/2 = 0.523 \text{ in } \textit{Ans.}$$

Pinion Base-Circle:

$$d_1 = N_1/P = 21/3 = 7 \text{ in}$$

$$d_{1b} = 7 \cos 20^\circ = 6.578 \text{ in } \textit{Ans.}$$

Gear Base-Circle:

$$d_2 = N_2/P = 28/3 = 9.333 \text{ in}$$

$$d_{2b} = 9.333 \cos 20^\circ = 8.770 \text{ in } \textit{Ans.}$$

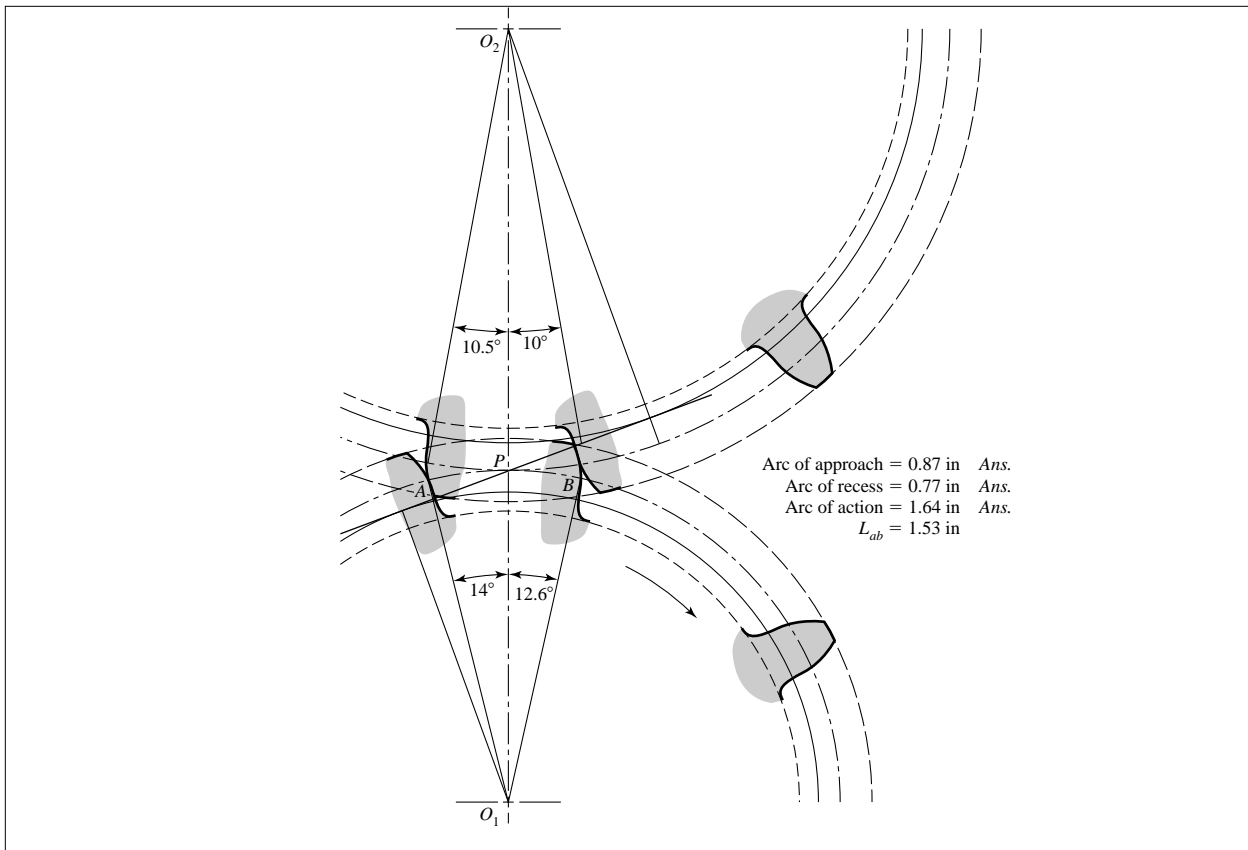
Base pitch:

$$p_b = p_c \cos 20^\circ = (1/3) \cos 20^\circ = 0.984 \text{ in } \textit{Ans.}$$

Contact Ratio:

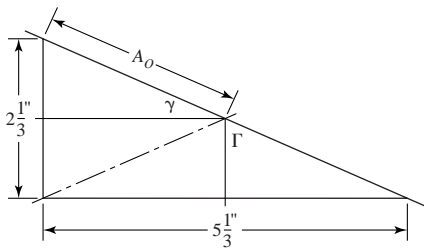
$$m_c = L_{ab}/p_b = 1.53/0.984 = 1.55 \textit{ Ans.}$$

See the next page for a drawing of the gears and the arc lengths.



13-5

(a) $A_O = \left[\left(\frac{14/6}{2} \right)^2 + \left(\frac{32/6}{2} \right)^2 \right]^{1/2} = 2.910 \text{ in } \textit{Ans.}$

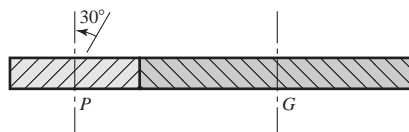


(b) $= \tan^{-1}(14/32) = 23.63^\circ \textit{ Ans.}$
 $= \tan^{-1}(32/14) = 66.37^\circ \textit{ Ans.}$

(c) $d_P = 14/6 = 2.333 \text{ in,}$
 $d_G = 32/6 = 5.333 \text{ in } \textit{Ans.}$

(d) From Table 13-3, $0.3A_O = 0.873 \text{ in}$ and $10/P = 10/6 = 1.67$
 $0.873 < 1.67 \therefore F = 0.873 \text{ in } \textit{Ans.}$

13-6



(a) $p_n = /5 = 0.6283 \text{ in}$
 $p_t = p_n / \cos 30^\circ = 0.6283 / \cos 30^\circ = 0.7255 \text{ in}$
 $p_x = p_t / \tan 30^\circ = 0.7255 / \tan 30^\circ = 1.25 \text{ in}$

(b) Eq. (13-7): $p_{nb} = p_n \cos \phi_n = 0.6283 \cos 20^\circ = 0.590$ in *Ans.*

(c) $P_t = P_n \cos \phi_n = 5 \cos 30^\circ = 4.33$ teeth/in

$$\phi_t = \tan^{-1}(\tan \phi_n / \cos \phi_n) = \tan^{-1}(\tan 20^\circ / \cos 30^\circ) = 22.8^\circ \text{ *Ans.*}$$

(d) Table 13-4:

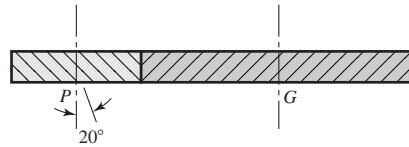
$$a = 1/5 = 0.200 \text{ in } \textit{Ans.}$$

$$b = 1.25/5 = 0.250 \text{ in } \textit{Ans.}$$

$$d_P = \frac{17}{5 \cos 30^\circ} = 3.926 \text{ in } \textit{Ans.}$$

$$d_G = \frac{34}{5 \cos 30^\circ} = 7.852 \text{ in } \textit{Ans.}$$

13-7



$N_P = 19$ teeth, $N_G = 57$ teeth, $\phi_n = 14.5^\circ$, $P_n = 10$ teeth/in

(a) $p_n = P_n / 10 = 0.3142$ in *Ans.*

$$p_t = \frac{p_n}{\cos \phi_n} = \frac{0.3142}{\cos 20^\circ} = 0.3343 \text{ in } \textit{Ans.}$$

$$p_x = \frac{p_t}{\tan \phi_n} = \frac{0.3343}{\tan 20^\circ} = 0.9185 \text{ in } \textit{Ans.}$$

(b) $P_t = P_n \cos \phi_n = 10 \cos 20^\circ = 9.397$ teeth/in *Ans.*

$$\phi_t = \tan^{-1} \left(\frac{\tan 14.5^\circ}{\cos 20^\circ} \right) = 15.39^\circ \text{ *Ans.*}$$

(c) $a = 1/10 = 0.100$ in *Ans.*

$$b = 1.25/10 = 0.125 \text{ in } \textit{Ans.}$$

$$d_P = \frac{19}{10 \cos 20^\circ} = 2.022 \text{ in } \textit{Ans.}$$

$$d_G = \frac{57}{10 \cos 20^\circ} = 6.066 \text{ in } \textit{Ans.}$$

13-8 (a) The smallest pinion tooth count that will run with itself is found from Eq. (13-10)

$$\begin{aligned} N_P &\geq \frac{2k}{3 \sin^2 \phi} \left(1 + \sqrt{1 + 3 \sin^2 \phi} \right) \\ &\geq \frac{2(1)}{3 \sin^2 20^\circ} \left(1 + \sqrt{1 + 3 \sin^2 20^\circ} \right) \\ &\geq 12.32 \rightarrow 13 \text{ teeth } \textit{Ans.} \end{aligned}$$

(b) The smallest pinion that will mesh with a gear ratio of $m_G = 2.5$, from Eq. (13-11) is

$$\begin{aligned} N_P &\geq \frac{2(1)}{[1 + 2(2.5)] \sin^2 20^\circ} \left\{ 2.5 + \sqrt{2.5^2 + [1 + 2(2.5)] \sin^2 20^\circ} \right\} \\ &\geq 14.64 \rightarrow 15 \text{ pinion teeth } \textit{Ans.} \end{aligned}$$

The largest gear-tooth count possible to mesh with this pinion, from Eq. (13-12) is

$$\begin{aligned} N_G &\leq \frac{N_P^2 \sin^2 \phi - 4k^2}{4k - 2N_P \sin^2 \phi} \\ &\leq \frac{15^2 \sin^2 20^\circ - 4(1)^2}{4(1) - 2(15) \sin^2 20^\circ} \\ &\leq 45.49 \rightarrow 45 \text{ teeth } \textit{Ans.} \end{aligned}$$

(c) The smallest pinion that will mesh with a rack, from Eq. (13-13)

$$\begin{aligned} N_P &\geq \frac{2k}{\sin^2 \phi} = \frac{2(1)}{\sin^2 20^\circ} \\ &\geq 17.097 \rightarrow 18 \text{ teeth } \textit{Ans.} \end{aligned}$$

13-9 $\phi_n = 20^\circ$, $\psi = 30^\circ$, $\phi_t = \tan^{-1}(\tan 20^\circ / \cos 30^\circ) = 22.80^\circ$

(a) The smallest pinion tooth count that will run itself is found from Eq. (13-21)

$$\begin{aligned} N_P &\geq \frac{2k \cos \psi}{3 \sin^2 \phi_t} \left(1 + \sqrt{1 + 3 \sin^2 \phi_t} \right) \\ &\geq \frac{2(1) \cos 30^\circ}{3 \sin^2 22.80^\circ} \left(1 + \sqrt{1 + 3 \sin^2 22.80^\circ} \right) \\ &\geq 8.48 \rightarrow 9 \text{ teeth } \textit{Ans.} \end{aligned}$$

(b) The smallest pinion that will mesh with a gear ratio of $m = 2.5$, from Eq. (13-22) is

$$\begin{aligned} N_P &\geq \frac{2(1) \cos 30^\circ}{[1 + 2(2.5)] \sin^2 22.80^\circ} \left\{ 2.5 + \sqrt{2.5^2 + [1 + 2(2.5)] \sin^2 22.80^\circ} \right\} \\ &\geq 9.95 \rightarrow 10 \text{ teeth } \textit{Ans.} \end{aligned}$$

The largest gear-tooth count possible to mesh with this pinion, from Eq. (13-23) is

$$\begin{aligned} N_G &\leq \frac{10^2 \sin^2 22.80^\circ - 4(1) \cos^2 30^\circ}{4(1) \cos^2 30^\circ - 2(20) \sin^2 22.80^\circ} \\ &\leq 26.08 \rightarrow 26 \text{ teeth } \textit{Ans.} \end{aligned}$$

(c) The smallest pinion that will mesh with a rack, from Eq. (13-24) is

$$N_P = \frac{2(1) \cos 30^\circ}{\sin^2 22.80^\circ} = 11.53 \quad 12 \text{ teeth} \quad \text{Ans.}$$

13-10 Pressure Angle:

$$t = \tan^{-1} \left(\frac{\tan 20^\circ}{\cos 30^\circ} \right) = 22.796^\circ$$

Program Eq. (13-24) on a computer using a spreadsheet or code and increment N_P . The first value of N_P that can be doubled is $N_P = 10$ teeth, where $N_G = 26.01$ teeth. So $N_G = 20$ teeth will work. Higher tooth counts will work also, for example 11:22, 12:24, etc.

Use 10:20 *Ans.*

13-11 Refer to Prob. 13-10 solution. The first value of N_P that can be multiplied by 6 is $N_P = 11$ teeth where $N_G = 93.6$ teeth. So $N_G = 66$ teeth.

Use 11:66 *Ans.*

13-12 Begin with the more general relation, Eq. (13-24), for full depth teeth.

$$N_G = \frac{N_P^2 \sin^2 t - 4 \cos^2 t}{4 \cos t - 2N_P \sin^2 t}$$

For a rack, set the denominator to zero

$$4 \cos t - 2N_P \sin^2 t = 0$$

From which

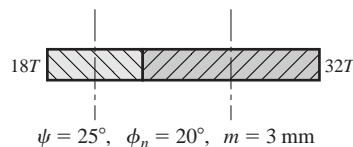
$$\sin t = \sqrt{\frac{2 \cos t}{N_P}}$$

$$t = \sin^{-1} \sqrt{\frac{2 \cos t}{N_P}}$$

For $N_P = 9$ teeth and $t = 0$ for spur gears,

$$t = \sin^{-1} \sqrt{\frac{2(1)}{9}} = 28.126^\circ \quad \text{Ans.}$$

13-13



(a) $p_n = m_n = 3 \text{ mm} \quad \text{Ans.}$

$$p_t = 3 / \cos 25^\circ = 10.4 \text{ mm} \quad \text{Ans.}$$

$$p_x = 10.4 / \tan 25^\circ = 22.3 \text{ mm} \quad \text{Ans.}$$

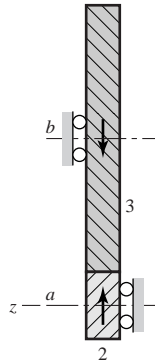
(b) $m_t = 10.4 / = 3.310 \text{ mm } Ans.$

$$t = \tan^{-1} \frac{\tan 20^\circ}{\cos 25^\circ} = 21.88^\circ \text{ } Ans.$$

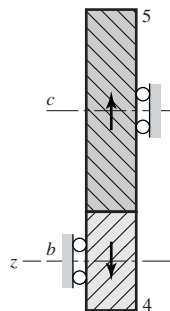
(c) $d_P = 3.310(18) = 59.58 \text{ mm } Ans.$

$d_G = 3.310(32) = 105.92 \text{ mm } Ans.$

13-14 (a) The axial force of 2 on shaft *a* is in the negative direction. The axial force of 3 on shaft *b* is in the positive direction of *z*. *Ans.*



The axial force of gear 4 on shaft *b* is in the positive *z*-direction. The axial force of gear 5 on shaft *c* is in the negative *z*-direction. *Ans.*



(b) $n_c = n_5 = \frac{14}{54} \left(\frac{16}{36} \right) (900) = +103.7 \text{ rev/min ccw } Ans.$

(c) $d_{P2} = 14 / (10 \cos 30^\circ) = 1.6166 \text{ in}$

$d_{G3} = 54 / (10 \cos 30^\circ) = 6.2354 \text{ in}$

$C_{ab} = \frac{1.6166 + 6.2354}{2} = 3.926 \text{ in } Ans.$

$d_{P4} = 16 / (6 \cos 25^\circ) = 2.9423 \text{ in}$

$d_{G5} = 36 / (6 \cos 25^\circ) = 6.6203 \text{ in}$

$C_{bc} = 4.781 \text{ in } Ans.$

13-15

$$e = \frac{20}{40} \left(\frac{8}{17} \right) \left(\frac{20}{60} \right) = \frac{4}{51}$$

$n_d = \frac{4}{51} (600) = 47.06 \text{ rev/min cw } Ans.$

13-16

$$e = \frac{6}{10} \left(\frac{18}{38} \right) \left(\frac{20}{48} \right) \left(\frac{3}{36} \right) = \frac{3}{304}$$

$$n_a = \frac{3}{304}(1200) = 11.84 \text{ rev/min cw } \textit{Ans.}$$

13-17

$$\text{(a) } n_c = \frac{12}{40} \cdot \frac{1}{1}(540) = 162 \text{ rev/min cw about } x. \textit{ Ans.}$$

$$\text{(b) } d_P = 12/(8 \cos 23^\circ) = 1.630 \text{ in}$$

$$d_G = 40/(8 \cos 23^\circ) = 5.432 \text{ in}$$

$$\frac{d_P + d_G}{2} = 3.531 \text{ in } \textit{Ans.}$$

$$\text{(c) } d = \frac{32}{4} = 8 \text{ in at the large end of the teeth. } \textit{Ans.}$$

13-18 (a) The planet gears act as keys and the wheel speeds are the same as that of the ring gear. Thus

$$n_A = n_3 = 1200(17/54) = 377.8 \text{ rev/min } \textit{Ans.}$$

$$\text{(b) } n_F = n_5 = 0, \quad n_L = n_6, \quad e = -1$$

$$-1 = \frac{n_6 - 377.8}{0 - 377.8}$$

$$377.8 = n_6 - 377.8$$

$$n_6 = 755.6 \text{ rev/min } \textit{Ans.}$$

Alternatively, the velocity of the center of gear 4 is $v_{4c} = N_6 n_3$. The velocity of the left edge of gear 4 is zero since the left wheel is resting on the ground. Thus, the velocity of the right edge of gear 4 is $2v_{4c} = 2N_6 n_3$. This velocity, divided by the radius of gear 6 N_6 , is angular velocity of gear 6—the speed of wheel 6.

$$\therefore n_6 = \frac{2N_6 n_3}{N_6} = 2n_3 = 2(377.8) = 755.6 \text{ rev/min } \textit{Ans.}$$

(c) The wheel spins freely on icy surfaces, leaving no traction for the other wheel. The car is stalled. *Ans.*

13-19 (a) The motive power is divided equally among four wheels instead of two.

(b) Locking the center differential causes 50 percent of the power to be applied to the rear wheels and 50 percent to the front wheels. If one of the rear wheels, rests on a slippery surface such as ice, the other rear wheel has no traction. But the front wheels still provide traction, and so you have two-wheel drive. However, if the rear differential is locked, you have 3-wheel drive because the rear-wheel power is now distributed 50-50.

13-20 Let gear 2 be first, then $n_F = n_2 = 0$. Let gear 6 be last, then $n_L = n_6 = -12$ rev/min.

$$e = \frac{20}{30} \left(\frac{16}{34} \right) = \frac{16}{51}, \quad e = \frac{n_L - n_A}{n_F - n_A}$$

$$(0 - n_A) \frac{16}{51} = -12 - n_A$$

$$n_A = \frac{-12}{35/51} = -17.49 \text{ rev/min (negative indicates cw) } \textit{Ans.}$$

13-21 Let gear 2 be first, then $n_F = n_2 = 180$ rev/min. Let gear 6 be last, then $n_L = n_6 = 0$.

$$e = \frac{20}{30} \left(\frac{16}{34} \right) = \frac{16}{51}, \quad e = \frac{n_L - n_A}{n_F - n_A}$$

$$(180 - n_A) \frac{16}{51} = (0 - n_A)$$

$$n_A = \left(-\frac{16}{35} \right) 180 = -82.29 \text{ rev/min}$$

The negative sign indicates opposite $n_2 \therefore n_A = 82.29$ rev/min cw *Ans.*

13-22 $N_5 = 12 + 2(16) + 2(12) = 68$ teeth *Ans.*

Let gear 2 be first, $n_F = n_2 = 320$ rev/min. Let gear 5 be last, $n_L = n_5 = 0$

$$e = \frac{12}{16} \left(\frac{16}{12} \right) \left(\frac{12}{68} \right) = \frac{3}{17}, \quad e = \frac{n_L - n_A}{n_F - n_A}$$

$$320 - n_A = \frac{17}{3}(0 - n_A)$$

$$n_A = -\frac{3}{14}(320) = -68.57 \text{ rev/min}$$

The negative sign indicates opposite of $n_2 \therefore n_A = 68.57$ rev/min cw *Ans.*

13-23 Let $n_F = n_2$ then $n_L = n_7 = 0$.

$$e = -\frac{24}{18} \left(\frac{18}{30} \right) \left(\frac{36}{54} \right) = -\frac{8}{15}$$

$$e = \frac{n_L - n_5}{n_F - n_5} = -\frac{8}{15}$$

$$\frac{0 - 5}{n_2 - 5} = -\frac{8}{15} \quad n_2 = 5 + \frac{15}{8}(5) = 14.375 \text{ turns in same direction}$$

13-24 (a) $= 2 \ n/60$

$$H = T = 2 \ Tn/60 \quad (T \text{ in N} \cdot \text{m}, H \text{ in W})$$

So

$$T = \frac{60H(10^3)}{2n}$$

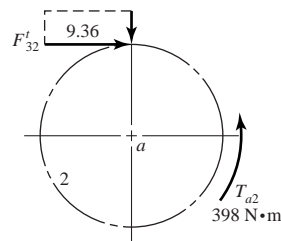
$$= 9550H/n \quad (H \text{ in kW, } n \text{ in rev/min})$$

$$T_a = \frac{9550(75)}{1800} = 398 \text{ N} \cdot \text{m}$$

$$r_2 = \frac{mN_2}{2} = \frac{5(17)}{2} = 42.5 \text{ mm}$$

So

$$F_{32}^t = \frac{T_a}{r_2} = \frac{398}{42.5} = 9.36 \text{ kN}$$

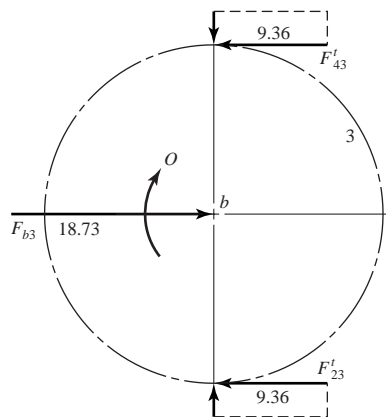


$$F_{3b} = -F_{b3} = 2(9.36) = 18.73 \text{ kN in the positive } x\text{-direction. Ans.}$$

See the figure in part (b).

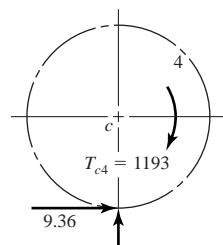
(b)

$$r_4 = \frac{mN_4}{2} = \frac{5(51)}{2} = 127.5 \text{ mm}$$



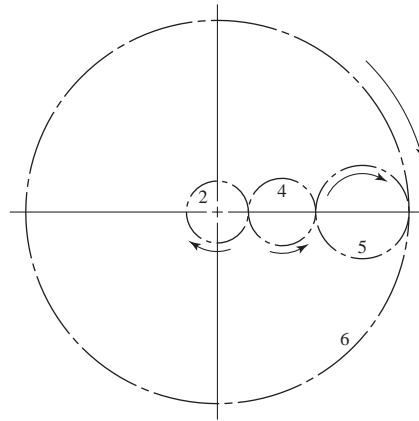
$$T_{c4} = 9.36(127.5) = 1193 \text{ N} \cdot \text{m ccw}$$

$$\therefore T_{4c} = 1193 \text{ N} \cdot \text{m cw Ans.}$$



Note: The solution is independent of the pressure angle.

13-25



$$d = \frac{N}{6}$$

$$d_2 = 4 \text{ in}, \quad d_4 = 4 \text{ in}, \quad d_5 = 6 \text{ in}, \quad d_6 = 24 \text{ in}$$

$$e = \frac{24}{24} \left(\frac{24}{36} \right) \left(\frac{36}{144} \right) = 1/6, \quad n_P = n_2 = 1000 \text{ rev/min}$$

$$n_L = n_6 = 0$$

$$e = \frac{n_L - n_A}{n_F - n_A} = \frac{0 - n_A}{1000 - n_A}$$

$$n_A = -200 \text{ rev/min}$$

Input torque:

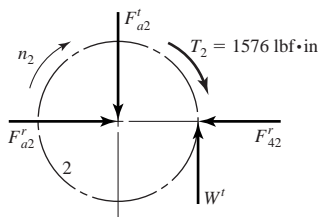
$$T_2 = \frac{63\,025H}{n}$$

$$T_2 = \frac{63\,025(25)}{1000} = 1576 \text{ lbf} \cdot \text{in}$$

For 100 percent gear efficiency

$$T_{\text{arm}} = \frac{63\,025(25)}{200} = 7878 \text{ lbf} \cdot \text{in}$$

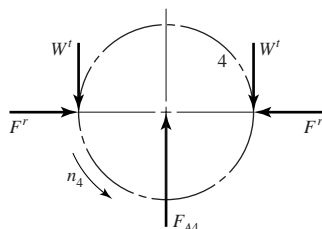
Gear 2



$$W^t = \frac{1576}{2} = 788 \text{ lbf}$$

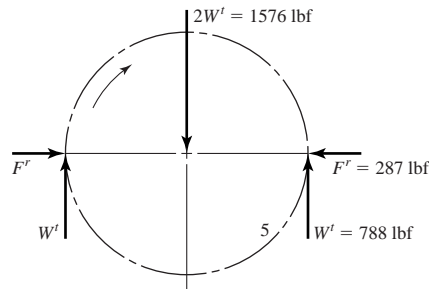
$$F_{32}^r = 788 \tan 20^\circ = 287 \text{ lbf}$$

Gear 4

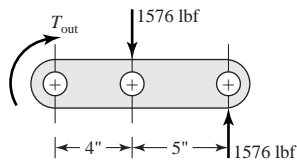


$$F_{A4} = 2W^t = 2(788) = 1576 \text{ lbf}$$

Gear 5



Arm

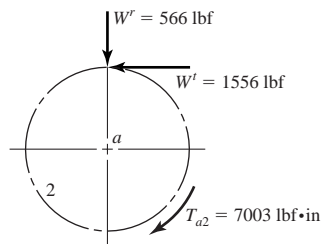


$$T_{out} = 1576(9) - 1576(4) = 7880 \text{ lbf} \cdot \text{in} \quad \text{Ans.}$$

13-26 Given: $P = 2$ teeth/in, $n_P = 1800$ rev/min cw, $N_2 = 18T$, $N_3 = 32T$, $N_4 = 18T$, $N_5 = 48T$.

Pitch Diameters: $d_2 = 18/2 = 9$ in; $d_3 = 32/2 = 16$ in; $d_4 = 18/2 = 9$ in; $d_5 = 48/2 = 24$ in.

Gear 2

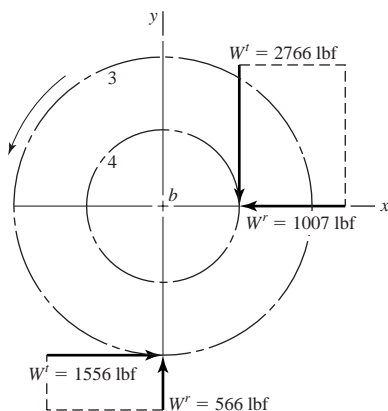


$$T_{a2} = 63\,025(200)/1800 = 7003 \text{ lbf} \cdot \text{in}$$

$$W^t = 7003/4.5 = 1556 \text{ lbf}$$

$$W^r = 1556 \tan 20^\circ = 566 \text{ lbf}$$

Gears 3 and 4



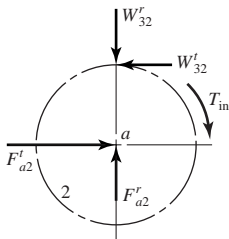
$$W^t(4.5) = 1556(8), \quad W^t = 2766 \text{ lbf}$$

$$W^r = 2766 \tan 20^\circ = 1007 \text{ lbf}$$

Ans.

13-27 Given: $P = 5$ teeth/in, $N_2 = 18T$, $N_3 = 45T$, $n = 20^\circ$, $H = 32$ hp, $n_2 = 1800$ rev/min.

Gear 2



$$T_{in} = \frac{63\,025(32)}{1800} = 1120 \text{ lbf} \cdot \text{in}$$

$$d_P = \frac{18}{5} = 3.600 \text{ in}$$

$$d_G = \frac{45}{5} = 9.000 \text{ in}$$

$$W_{32}^t = \frac{1120}{3.6/2} = 622 \text{ lbf}$$

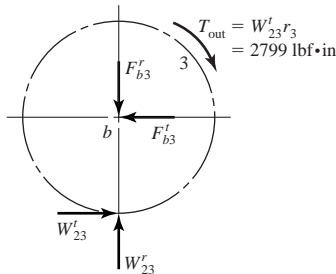
$$W_{32}^r = 622 \tan 20^\circ = 226 \text{ lbf}$$

$$F_{a2}^t = W_{32}^t = 622 \text{ lbf}, \quad F_{a2}^r = W_{32}^r = 226 \text{ lbf}$$

$$F_{a2} = (622^2 + 226^2)^{1/2} = 662 \text{ lbf}$$

Each bearing on shaft a has the same radial load of $R_A = R_B = 662/2 = 331$ lbf.

Gear 3



$$W_{23}^t = W_{32}^t = 622 \text{ lbf}$$

$$W_{23}^r = W_{32}^r = 226 \text{ lbf}$$

$$F_{b3} = F_{b2} = 662 \text{ lbf}$$

$$R_C = R_D = 662/2 = 331 \text{ lbf}$$

Each bearing on shaft b has the same radial load which is equal to the radial load of bearings, A and B . Thus, all four bearings have the same radial load of 331 lbf. *Ans.*

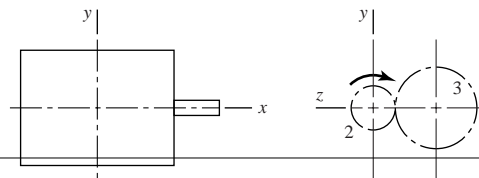
13-28 Given: $P = 4$ teeth/in, $n = 20$, $N_P = 20T$, $n_2 = 900$ rev/min.

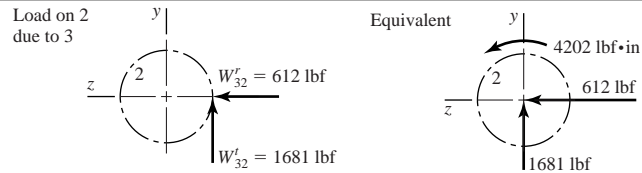
$$d_2 = \frac{N_P}{P} = \frac{20}{4} = 5.000 \text{ in}$$

$$T_{in} = \frac{63\,025(30)(2)}{900} = 4202 \text{ lbf} \cdot \text{in}$$

$$W_{32}^t = T_{in}/(d_2/2) = 4202/(5/2) = 1681 \text{ lbf}$$

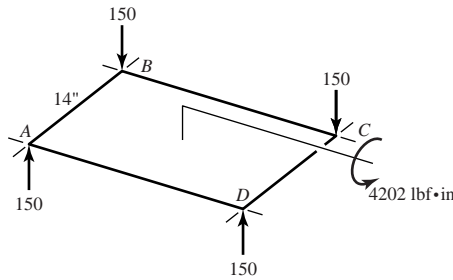
$$W_{32}^r = 1681 \tan 20 = 612 \text{ lbf}$$





The motor mount resists the equivalent forces and torque. The radial force due to torque

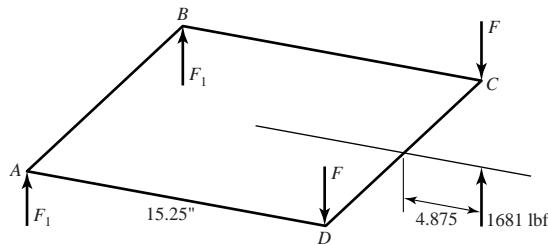
$$F^r = \frac{4202}{14(2)} = 150 \text{ lbf}$$



Forces reverse with rotational sense as torque reverses.

The compressive loads at A and D are absorbed by the base plate, not the bolts. For W_{32}^t , the tensions in C and D are

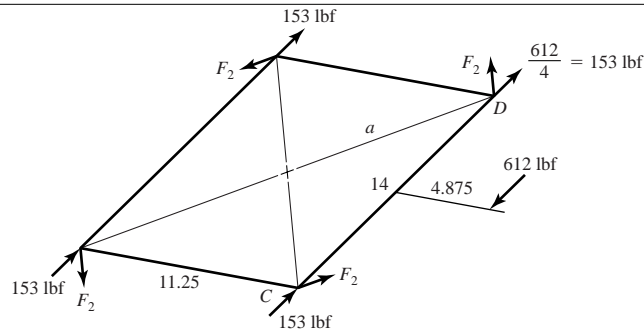
$$\sum M_{AB} = 0 \quad 1681(4.875 + 15.25) - 2F(15.25) = 0 \quad F = 1109 \text{ lbf}$$



If W_{32}^t reverses, 15.25 in changes to 13.25 in, 4.815 in changes to 2.875 in, and the forces change direction. For A and B,

$$1681(2.875) - 2F_1(13.25) = 0 \quad F_1 = 182.4 \text{ lbf}$$

For W_{32}^r



$$M = 612(4.875 + 11.25/2) = 6426 \text{ lbf} \cdot \text{in}$$

$$a = \sqrt{(14/2)^2 + (11.25/2)^2} = 8.98 \text{ in}$$

$$F_2 = \frac{6426}{4(8.98)} = 179 \text{ lbf}$$

At *C* and *D*, the shear forces are:

$$F_{S1} = \sqrt{[153 + 179(5.625/8.98)]^2 + [179(7/8.98)]^2} = 300 \text{ lbf}$$

At *A* and *B*, the shear forces are:

$$F_{S2} = \sqrt{[153 - 179(5.625/8.98)]^2 + [179(7/8.98)]^2} = 145 \text{ lbf}$$

The shear forces are independent of the rotational sense.

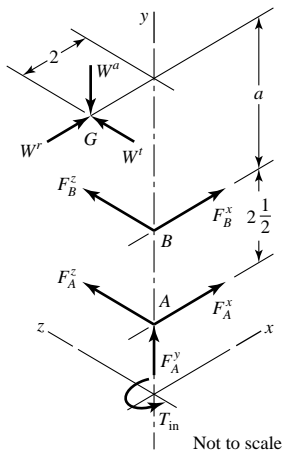
The bolt tensions and the shear forces for cw rotation are,

	Tension (lbf)	Shear (lbf)
A	0	145
B	0	145
C	1109	300
D	1109	300

For ccw rotation,

	Tension (lbf)	Shear (lbf)
A	182	145
B	182	145
C	0	300
D	0	300

13-29 $T_{in} = 63\,025H/n = 63\,025(2.5)/240 = 656.5 \text{ lbf} \cdot \text{in}$



$$W^t = T/r = 656.5/2 = 328.3 \text{ lbf}$$

$$= \tan^{-1}(2/4) = 26.565^\circ$$

$$= \tan^{-1}(4/2) = 63.435^\circ$$

$$a = 2 + (1.5 \cos 26.565^\circ)/2 = 2.67 \text{ in}$$

$$W^t = 328.3 \tan 20^\circ \cos 26.565^\circ = 106.9 \text{ lbf}$$

$$W^a = 328.3 \tan 20^\circ \sin 26.565^\circ = 53.4 \text{ lbf}$$

$$\mathbf{W} = 106.9\mathbf{i} - 53.4\mathbf{j} + 328.3\mathbf{k} \text{ lbf}$$

$$\mathbf{R}_{AG} = -2\mathbf{i} + 5.17\mathbf{j}, \quad \mathbf{R}_{AB} = 2.5\mathbf{j}$$

$$\sum \mathbf{M}_A = \mathbf{R}_{AG} \times \mathbf{W} + \mathbf{R}_{AB} \times \mathbf{F}_B + \mathbf{T} = \mathbf{0}$$

Solving gives

$$\mathbf{R}_{AB} \times \mathbf{F}_B = 2.5F_B^z\mathbf{i} - 2.5F_B^x\mathbf{k}$$

$$\mathbf{R}_{AG} \times \mathbf{W} = 1697\mathbf{i} + 656.6\mathbf{j} - 445.9\mathbf{k}$$

So

$$(1697\mathbf{i} + 656.6\mathbf{j} - 445.9\mathbf{k}) + (2.5F_B^z\mathbf{i} - 2.5F_B^x\mathbf{k} + T\mathbf{j}) = \mathbf{0}$$

$$F_B^z = -1697/2.5 = -678.8 \text{ lbf}$$

$$T = -656.6 \text{ lbf} \cdot \text{in}$$

$$F_B^x = -445.9/2.5 = -178.4 \text{ lbf}$$

So

$$F_B = [(-678.8)^2 + (-178.4)^2]^{1/2} = 702 \text{ lbf} \quad \text{Ans.}$$

$$\mathbf{F}_A = -(\mathbf{F}_B + \mathbf{W})$$

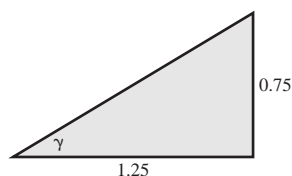
$$= -(-178.4\mathbf{i} - 678.8\mathbf{k} + 106.9\mathbf{i} - 53.4\mathbf{j} + 328.3\mathbf{k})$$

$$= 71.5\mathbf{i} + 53.4\mathbf{j} + 350.5\mathbf{k}$$

$$F_A \text{ (radial)} = (71.5^2 + 350.5^2)^{1/2} = 358 \text{ lbf} \quad \text{Ans.}$$

$$F_A \text{ (thrust)} = 53.4 \text{ lbf} \quad \text{Ans.}$$

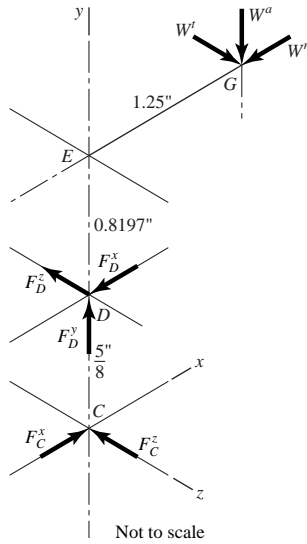
13-30



$$d_2 = 15/10 = 1.5 \text{ in}, \quad W^t = 30 \text{ lbf}, \quad d_3 = \frac{25}{10} = 2.5 \text{ in}$$

$$= \tan^{-1} \frac{0.75}{1.25} = 30.96^\circ, \quad = 59.04^\circ$$

$$DE = \frac{9}{16} + 0.5 \cos 59.04^\circ = 0.8197 \text{ in}$$



$$W^r = 30 \tan 20^\circ \cos 59.04^\circ = 5.617 \text{ lbf}$$

$$W^a = 30 \tan 20^\circ \sin 59.04^\circ = 9.363 \text{ lbf}$$

$$\mathbf{W} = -5.617\mathbf{i} - 9.363\mathbf{j} + 30\mathbf{k}$$

$$\mathbf{R}_{DG} = 0.8197\mathbf{j} + 1.25\mathbf{i}$$

$$\mathbf{R}_{DC} = -0.625\mathbf{j}$$

$$\sum \mathbf{M}_D = \mathbf{R}_{DG} \times \mathbf{W} + \mathbf{R}_{DC} \times \mathbf{F}_C + \mathbf{T} = \mathbf{0}$$

$$\mathbf{R}_{DG} \times \mathbf{W} = 24.591\mathbf{i} - 37.5\mathbf{j} - 7.099\mathbf{k}$$

$$\mathbf{R}_{DC} \times \mathbf{F}_C = -0.625F_C^z\mathbf{i} + 0.625F_C^x\mathbf{k}$$

$$T = 37.5 \text{ lbf} \cdot \text{in} \quad \text{Ans.}$$

$$\mathbf{F}_C = 11.4\mathbf{i} + 39.3\mathbf{k} \text{ lbf} \quad \text{Ans.}$$

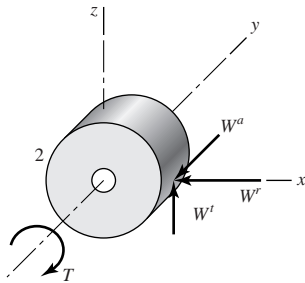
$$F_C = (11.4^2 + 39.3^2)^{1/2} = 40.9 \text{ lbf} \quad \text{Ans.}$$

$$\sum \mathbf{F} = \mathbf{0} \quad \mathbf{F}_D = -5.78\mathbf{i} + 9.363\mathbf{j} - 69.3\mathbf{k} \text{ lbf}$$

$$F_D \text{ (radial)} = [(-5.78)^2 + (-69.3)^2]^{1/2} = 69.5 \text{ lbf} \quad \text{Ans.}$$

$$F_D \text{ (thrust)} = W^a = 9.363 \text{ lbf} \quad \text{Ans.}$$

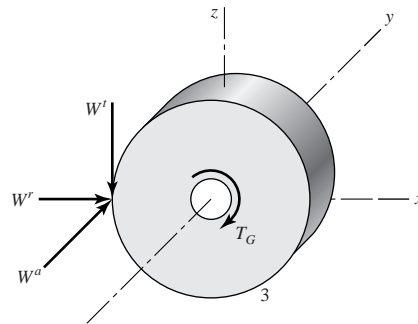
13-31 Sketch gear 2 pictorially.



$$P_t = P_n \cos \phi = 4 \cos 30^\circ = 3.464 \text{ teeth/in}$$

$$t = \tan^{-1} \frac{\tan n}{\cos \phi} = \tan^{-1} \frac{\tan 20^\circ}{\cos 30^\circ} = 22.80^\circ$$

Sketch gear 3 pictorially,



$$d_p = \frac{18}{3.464} = 5.196 \text{ in}$$

Pinion (Gear 2)

$$W^r = W^t \tan \phi_t = 800 \tan 22.80^\circ = 336 \text{ lbf}$$

$$W^a = W^t \tan \phi_n = 800 \tan 30^\circ = 462 \text{ lbf}$$

$$\mathbf{W} = -336\mathbf{i} - 462\mathbf{j} + 800\mathbf{k} \text{ lbf} \quad \text{Ans.}$$

$$W = [(-336)^2 + (-462)^2 + 800^2]^{1/2} = 983 \text{ lbf} \quad \text{Ans.}$$

Gear 3

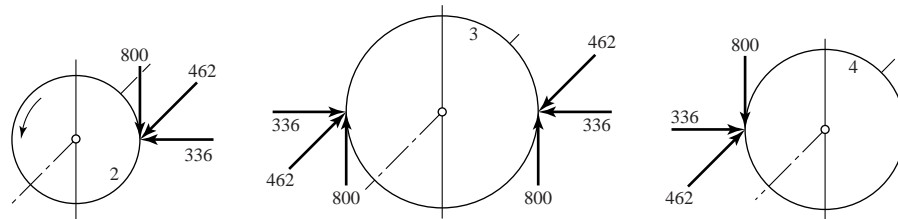
$$\mathbf{W} = 336\mathbf{i} + 462\mathbf{j} - 800\mathbf{k} \text{ lbf} \quad \text{Ans.}$$

$$W = 983 \text{ lbf} \quad \text{Ans.}$$

$$d_G = \frac{32}{3.464} = 9.238 \text{ in}$$

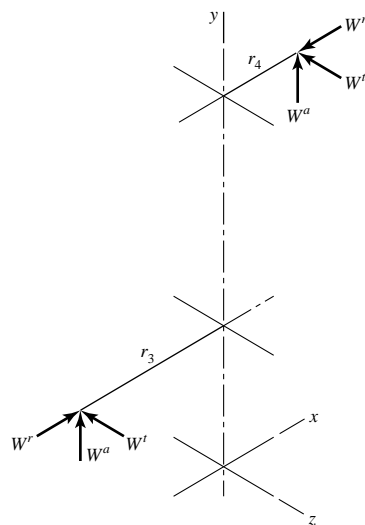
$$T_G = W^t r = 800(9.238) = 7390 \text{ lbf} \cdot \text{in}$$

13-32 From Prob. 13-31 solution,



Notice that the idler shaft reaction contains a couple tending to turn the shaft end-over-end. Also the idler teeth are bent both ways. Idlers are more severely loaded than other gears, belying their name. Thus be cautious.

13-33



Gear 3:

$$P_t = P_n \cos \phi_n = 7 \cos 30^\circ = 6.062 \text{ teeth/in}$$

$$\tan \phi_t = \frac{\tan 20^\circ}{\cos 30^\circ} = 0.4203, \quad \phi_t = 22.8^\circ$$

$$d_3 = \frac{54}{6.062} = 8.908 \text{ in}$$

$$W^t = 500 \text{ lbf}$$

$$W^a = 500 \tan 30^\circ = 288.7 \text{ lbf}$$

$$W^r = 500 \tan 22.8^\circ = 210.2 \text{ lbf}$$

$$\mathbf{W}_3 = 210.2\mathbf{i} + 288.7\mathbf{j} - 500\mathbf{k} \text{ lbf} \quad \text{Ans.}$$

Gear 4:

$$d_4 = \frac{14}{6.062} = 2.309 \text{ in}$$

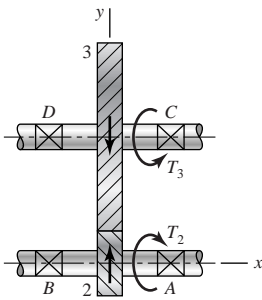
$$W^t = 500 \frac{8.908}{2.309} = 1929 \text{ lbf}$$

$$W^a = 1929 \tan 30^\circ = 1114 \text{ lbf}$$

$$W^r = 1929 \tan 22.8^\circ = 811 \text{ lbf}$$

$$\mathbf{W}_4 = -811\mathbf{i} + 1114\mathbf{j} - 1929\mathbf{k} \text{ lbf} \quad \text{Ans.}$$

13-34



$$P_t = 6 \cos 30^\circ = 5.196 \text{ teeth/in}$$

$$d_3 = \frac{42}{5.196} = 8.083 \text{ in}$$

$$t = 22.8^\circ$$

$$d_2 = \frac{16}{5.196} = 3.079 \text{ in}$$

$$T_2 = \frac{63\,025(25)}{1720} = 916 \text{ lbf} \cdot \text{in}$$

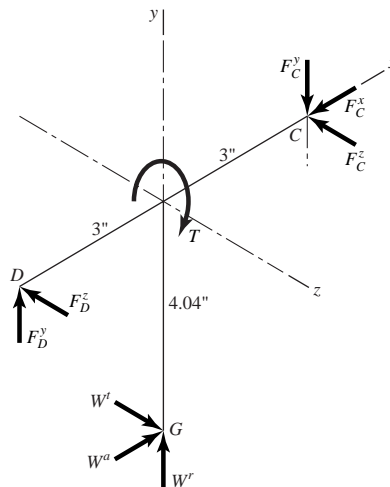
$$W^t = \frac{T}{r} = \frac{916}{3.079/2} = 595 \text{ lbf}$$

$$W^a = 595 \tan 30^\circ = 344 \text{ lbf}$$

$$W^r = 595 \tan 22.8^\circ = 250 \text{ lbf}$$

$$\mathbf{W} = 344\mathbf{i} + 250\mathbf{j} + 595\mathbf{k} \text{ lbf}$$

$$\mathbf{R}_{DC} = 6\mathbf{i}, \quad \mathbf{R}_{DG} = 3\mathbf{i} - 4.04\mathbf{j}$$



$$\sum \mathbf{M}_D = \mathbf{R}_{DC} \times \mathbf{F}_C + \mathbf{R}_{DG} \times \mathbf{W} + \mathbf{T} = \mathbf{0} \quad (1)$$

$$\mathbf{R}_{DG} \times \mathbf{W} = -2404\mathbf{i} - 1785\mathbf{j} + 2140\mathbf{k}$$

$$\mathbf{R}_{DC} \times \mathbf{F}_C = -6F_C^z\mathbf{j} + 6F_C^y\mathbf{k}$$

Substituting and solving Eq. (1) gives

$$\mathbf{T} = 2404\mathbf{i} \text{ lbf} \cdot \text{in}$$

$$F_C^z = -297.5 \text{ lbf}$$

$$F_C^y = -356.7 \text{ lbf}$$

$$\sum \mathbf{F} = \mathbf{F}_D + \mathbf{F}_C + \mathbf{W} = \mathbf{0}$$

Substituting and solving gives

$$F_C^x = -344 \text{ lbf}$$

$$F_D^y = 106.7 \text{ lbf}$$

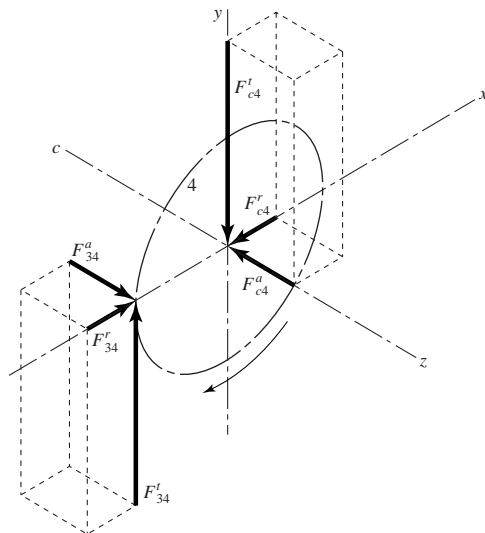
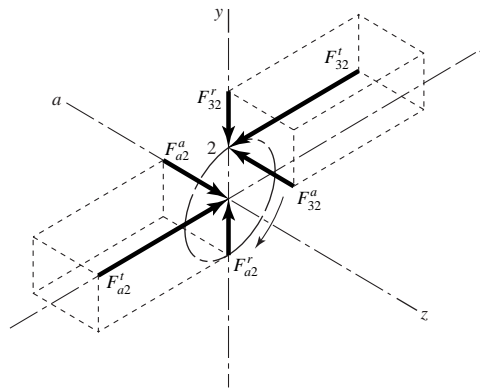
$$F_D^z = -297.5 \text{ lbf}$$

So

$$\mathbf{F}_C = -344\mathbf{i} - 356.7\mathbf{j} - 297.5\mathbf{k} \text{ lbf} \quad \text{Ans.}$$

$$\mathbf{F}_D = 106.7\mathbf{j} - 297.5\mathbf{k} \text{ lbf} \quad \text{Ans.}$$

13-35 $P_t = 8 \cos 15^\circ = 7.727 \text{ teeth/in}$



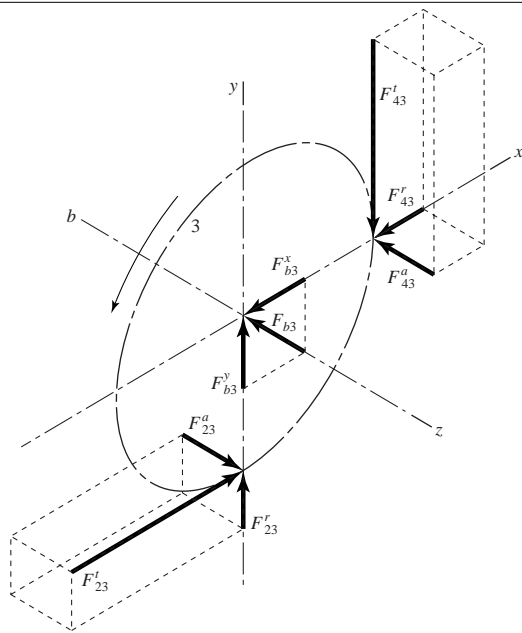
$$d_2 = 16/7.727 = 2.07 \text{ in}$$

$$d_3 = 36/7.727 = 4.66 \text{ in}$$

$$d_4 = 28/7.727 = 3.62 \text{ in}$$

$$T_2 = \frac{63\,025(7.5)}{1720} = 274.8 \text{ lbf} \cdot \text{in}$$

$$W^t = \frac{274.8}{2.07/2} = 266 \text{ lbf}$$



$$W^r = 266 \tan 20^\circ = 96.8 \text{ lbf}$$

$$W^a = 266 \tan 15^\circ = 71.3 \text{ lbf}$$

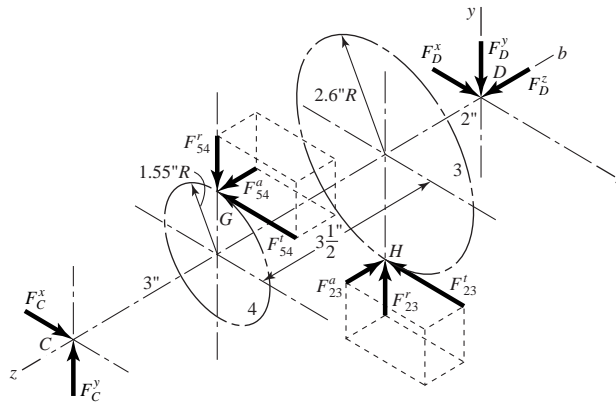
$$\mathbf{F}_{2a} = -266\mathbf{i} - 96.8\mathbf{j} - 71.3\mathbf{k} \text{ lbf Ans.}$$

$$\mathbf{F}_{3b} = (266 - 96.8)\mathbf{i} - (266 - 96.8)\mathbf{j}$$

$$= 169\mathbf{i} - 169\mathbf{j} \text{ lbf Ans.}$$

$$\mathbf{F}_{4c} = 96.8\mathbf{i} + 266\mathbf{j} + 71.3\mathbf{k} \text{ lbf Ans.}$$

13-36



$$d_2 = \frac{N}{P_n \cos} = \frac{14}{8 \cos 30^\circ} = 2.021 \text{ in}, \quad d_3 = \frac{36}{8 \cos 30^\circ} = 5.196 \text{ in}$$

$$d_4 = \frac{15}{5 \cos 15^\circ} = 3.106 \text{ in}, \quad d_5 = \frac{45}{5 \cos 15^\circ} = 9.317 \text{ in}$$

For gears 2 and 3: $t = \tan^{-1}(\tan \phi_n / \cos \psi) = \tan^{-1}(\tan 20^\circ / \cos 30^\circ) = 22.8^\circ$,
 For gears 4 and 5: $t = \tan^{-1}(\tan 20^\circ / \cos 15^\circ) = 20.6^\circ$,

$$F_{23}^t = T_2 / r = 1200 / (2.021 / 2) = 1188 \text{ lbf}$$

$$F_{54}^t = 1188 \frac{5.196}{3.106} = 1987 \text{ lbf}$$

$$F_{23}^r = F_{23}^t \tan t = 1188 \tan 22.8^\circ = 499 \text{ lbf}$$

$$F_{54}^r = 1986 \tan 20.6^\circ = 746 \text{ lbf}$$

$$F_{23}^a = F_{23}^t \tan \psi = 1188 \tan 30^\circ = 686 \text{ lbf}$$

$$F_{54}^a = 1986 \tan 15^\circ = 532 \text{ lbf}$$

Next, designate the points of action on gears 4 and 3, respectively, as points G and H , as shown. Position vectors are

$$\mathbf{R}_{CG} = 1.553\mathbf{j} - 3\mathbf{k}$$

$$\mathbf{R}_{CH} = -2.598\mathbf{j} - 6.5\mathbf{k}$$

$$\mathbf{R}_{CD} = -8.5\mathbf{k}$$

Force vectors are

$$\mathbf{F}_{54} = -1986\mathbf{i} - 748\mathbf{j} + 532\mathbf{k}$$

$$\mathbf{F}_{23} = -1188\mathbf{i} + 500\mathbf{j} - 686\mathbf{k}$$

$$\mathbf{F}_C = F_C^x\mathbf{i} + F_C^y\mathbf{j}$$

$$\mathbf{F}_D = F_D^x\mathbf{i} + F_D^y\mathbf{j} + F_D^z\mathbf{k}$$

Now, a summation of moments about bearing C gives

$$\sum \mathbf{M}_C = \mathbf{R}_{CG} \times \mathbf{F}_{54} + \mathbf{R}_{CH} \times \mathbf{F}_{23} + \mathbf{R}_{CD} \times \mathbf{F}_D = \mathbf{0}$$

The terms for this equation are found to be

$$\mathbf{R}_{CG} \times \mathbf{F}_{54} = -1412\mathbf{i} + 5961\mathbf{j} + 3086\mathbf{k}$$

$$\mathbf{R}_{CH} \times \mathbf{F}_{23} = 5026\mathbf{i} + 7722\mathbf{j} - 3086\mathbf{k}$$

$$\mathbf{R}_{CD} \times \mathbf{F}_D = 8.5F_D^y\mathbf{i} - 8.5F_D^x\mathbf{j}$$

When these terms are placed back into the moment equation, the \mathbf{k} terms, representing the shaft torque, cancel. The \mathbf{i} and \mathbf{j} terms give

$$F_D^y = -\frac{3614}{8.5} = -425 \text{ lbf} \quad \text{Ans.}$$

$$F_D^x = \frac{(13\,683)}{8.5} = 1610 \text{ lbf} \quad \text{Ans.}$$

Next, we sum the forces to zero.

$$\sum \mathbf{F} = \mathbf{F}_C + \mathbf{F}_{54} + \mathbf{F}_{23} + \mathbf{F}_D = \mathbf{0}$$

Substituting, gives

$$\begin{aligned} & (F_C^x\mathbf{i} + F_C^y\mathbf{j}) + (-1987\mathbf{i} - 746\mathbf{j} + 532\mathbf{k}) + (-1188\mathbf{i} + 499\mathbf{j} - 686\mathbf{k}) \\ & + (1610\mathbf{i} - 425\mathbf{j} + F_D^z\mathbf{k}) = \mathbf{0} \end{aligned}$$

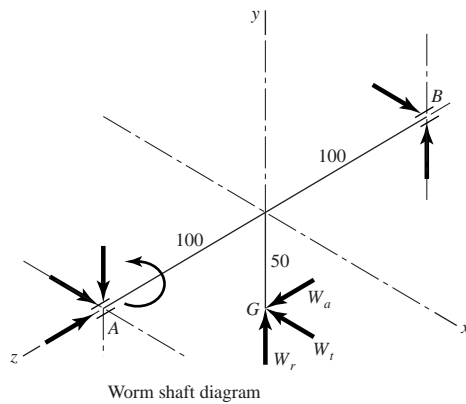
Solving gives

$$F_C^x = 1987 + 1188 - 1610 = 1565 \text{ lbf}$$

$$F_C^y = 746 - 499 + 425 = 672 \text{ lbf}$$

$$F_D^z = -532 + 686 = 154 \text{ lbf} \quad \text{Ans.}$$

13-37



$$V_W = \frac{d_W n_W}{60} = \frac{(0.100)(600)}{60} = \quad \text{m/s}$$

$$W_{Wt} = \frac{H}{V_W} = \frac{2000}{60} = 637 \text{ N}$$

$$L = p_x N_W = 25(1) = 25 \text{ mm}$$

$$= \tan^{-1} \frac{L}{d_W}$$

$$= \tan^{-1} \frac{25}{(100)} = 4.550^\circ \quad \text{lead angle}$$

$$W = \frac{W_{Wt}}{\cos \phi_n \sin \phi + f \cos \phi}$$

$$V_S = \frac{V_W}{\cos \phi} = \frac{3.152}{\cos 4.550^\circ} = 3.152 \text{ m/s}$$

In ft/min: $V_S = 3.28(3.152) = 10.33 \text{ ft/s} = 620 \text{ ft/min}$

Use $f = 0.043$ from curve A of Fig. 13-42. Then from the first of Eq. (13-43)

$$W = \frac{637}{\cos 14.5^\circ (\sin 4.55^\circ) + 0.043 \cos 4.55^\circ} = 5323 \text{ N}$$

$$W^y = W \sin \phi_n = 5323 \sin 14.5^\circ = 1333 \text{ N}$$

$$W^z = 5323 [\cos 14.5^\circ (\cos 4.55^\circ) - 0.043 \sin 4.55^\circ] = 5119 \text{ N}$$

The force acting against the worm is

$$\mathbf{W} = -637\mathbf{i} + 1333\mathbf{j} + 5119\mathbf{k} \text{ N}$$

Thus A is the thrust bearing. *Ans.*

$$\mathbf{R}_{AG} = -0.05\mathbf{j} - 0.10\mathbf{k}, \quad \mathbf{R}_{AB} = -0.20\mathbf{k}$$

$$\sum \mathbf{M}_A = \mathbf{R}_{AG} \times \mathbf{W} + \mathbf{R}_{AB} \times \mathbf{F}_B + \mathbf{T} = \mathbf{0}$$

$$\mathbf{R}_{AG} \times \mathbf{W} = -122.6\mathbf{i} + 63.7\mathbf{j} - 31.85\mathbf{k}$$

$$\mathbf{R}_{AB} \times \mathbf{F}_B = 0.2F_B^y\mathbf{i} - 0.2F_B^x\mathbf{j}$$

Substituting and solving gives

$$T = 31.85 \text{ N} \cdot \text{m} \quad \text{Ans.}$$

$$F_B^x = 318.5 \text{ N}, \quad F_B^y = 613 \text{ N}$$

So $\mathbf{F}_B = 318.5\mathbf{i} + 613\mathbf{j} \text{ N}$ *Ans.*

Or $F_B = [(613)^2 + (318.5)^2]^{1/2} = 691 \text{ N radial}$

$$\sum \mathbf{F} = \mathbf{F}_A + \mathbf{W} + \mathbf{R}_B = \mathbf{0}$$

$$\begin{aligned} \mathbf{F}_A &= -(\mathbf{W} + \mathbf{F}_B) = -(-637\mathbf{i} + 1333\mathbf{j} + 5119\mathbf{k} + 318.5\mathbf{i} + 613\mathbf{j}) \\ &= 318.5\mathbf{i} - 1946\mathbf{j} - 5119\mathbf{k} \quad \text{Ans.} \end{aligned}$$

$$\begin{aligned} \text{Radial} \quad \mathbf{F}_A^r &= 318.5\mathbf{i} - 1946\mathbf{j} \text{ N}, \\ F_A^r &= [(318.5)^2 + (-1946)^2]^{1/2} = 1972 \text{ N} \\ \text{Thrust} \quad F_A^t &= -5119 \text{ N} \end{aligned}$$

13-38 From Prob. 13-37

$$\mathbf{W}_G = 637\mathbf{i} - 1333\mathbf{j} - 5119\mathbf{k} \text{ N}$$

$$p_t = p_x$$

$$\text{So} \quad d_G = \frac{N_G p_x}{N_G} = \frac{48(25)}{25} = 382 \text{ mm}$$

Bearing D to take thrust load

$$\sum \mathbf{M}_D = \mathbf{R}_{DG} \times \mathbf{W}_G + \mathbf{R}_{DC} \times \mathbf{F}_C + \mathbf{T} = \mathbf{0}$$

$$\mathbf{R}_{DG} = -0.0725\mathbf{i} + 0.191\mathbf{j}$$

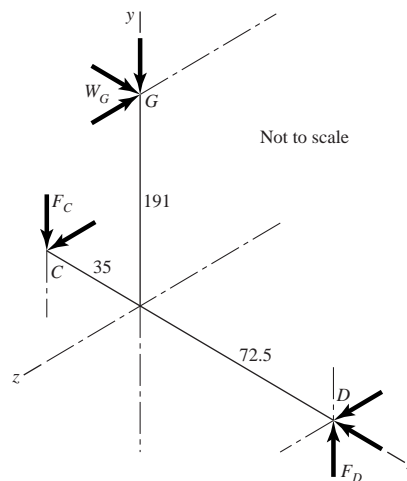
$$\mathbf{R}_{DC} = -0.1075\mathbf{i}$$

The position vectors are in meters.

$$\mathbf{R}_{DG} \times \mathbf{W}_G = -977.7\mathbf{i} - 371.1\mathbf{j} - 25.02\mathbf{k}$$

$$\mathbf{R}_{DC} \times \mathbf{F}_C = 0.1075 F_C^z \mathbf{j} - 0.1075 F_C^y \mathbf{k}$$

Putting it together and solving



Gives

$$T = 977.7 \text{ N} \cdot \text{m} \quad \text{Ans.}$$

$$\mathbf{F}_C = -233\mathbf{j} + 3450\mathbf{k} \text{ N}, \quad F_C = 3460 \text{ N} \quad \text{Ans.}$$

$$\sum \mathbf{F} = \mathbf{F}_C + \mathbf{W}_G + \mathbf{F}_D = \mathbf{0}$$

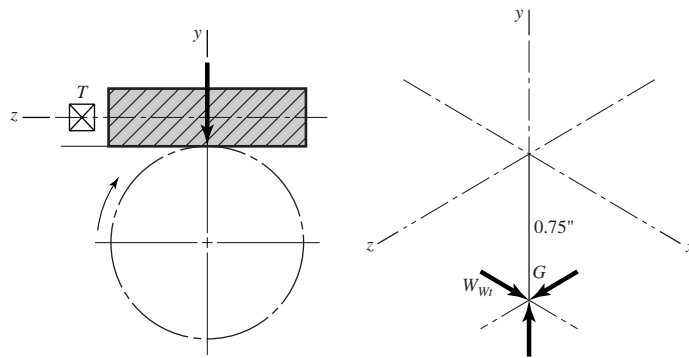
$$\mathbf{F}_D = -(\mathbf{F}_C + \mathbf{W}_G) = -637\mathbf{i} + 1566\mathbf{j} + 1669\mathbf{k} \text{ N} \quad \text{Ans.}$$

$$\text{Radial} \quad \mathbf{F}_D^r = 1566\mathbf{j} + 1669\mathbf{k} \text{ N}$$

$$\text{Or} \quad F_D^r = 2289 \text{ N} \quad (\text{total radial})$$

$$F_D^t = -637\mathbf{i} \text{ N} \quad (\text{thrust})$$

13-39



$$V_W = \frac{(1.5)(900)}{12} = 353.4 \text{ ft/min}$$

$$W^x = W_{Wt} = \frac{33\,000(0.5)}{353.4} = 46.69 \text{ lbf}$$

$$p_t = p_x = \frac{1}{10} = 0.31416 \text{ in}$$

$$L = 0.31416(2) = 0.628 \text{ in}$$

$$= \tan^{-1} \frac{0.628}{(1.5)} = 7.59^\circ$$

$$W = \frac{46.7}{\cos 14.5^\circ \sin 7.59^\circ + 0.05 \cos 7.59^\circ} = 263 \text{ lbf}$$

$$W^y = 263 \sin 14.5 = 65.8 \text{ lbf}$$

$$W^z = 263[\cos 14.5 (\cos 7.59) - 0.05 \sin 7.59] = 251 \text{ lbf}$$

So $\mathbf{W} = 46.7\mathbf{i} + 65.8\mathbf{j} + 251\mathbf{k} \text{ lbf} \quad \text{Ans.}$

$$T = 46.7(0.75) = 35 \text{ lbf} \cdot \text{in} \quad \text{Ans.}$$

13-40 Computer programs will vary.

Chapter 14

14-1

$$d = \frac{N}{P} = \frac{22}{6} = 3.667 \text{ in}$$

Table 14-2: $Y = 0.331$

$$V = \frac{\pi dn}{12} = \frac{\pi(3.667)(1200)}{12} = 1152 \text{ ft/min}$$

Eq. (14-4b): $K_v = \frac{1200 + 1152}{1200} = 1.96$

$$W^t = \frac{T}{d/2} = \frac{63\,025H}{nd/2} = \frac{63\,025(15)}{1200(3.667/2)} = 429.7 \text{ lbf}$$

Eq. (14-7):

$$\sigma = \frac{K_v W^t P}{FY} = \frac{1.96(429.7)(6)}{2(0.331)} = 7633 \text{ psi} = 7.63 \text{ kpsi} \quad \text{Ans.}$$

14-2

$$d = \frac{16}{12} = 1.333 \text{ in}, \quad Y = 0.296$$

$$V = \frac{\pi(1.333)(700)}{12} = 244.3 \text{ ft/min}$$

Eq. (14-4b): $K_v = \frac{1200 + 244.3}{1200} = 1.204$

$$W^t = \frac{63\,025H}{nd/2} = \frac{63\,025(1.5)}{700(1.333/2)} = 202.6 \text{ lbf}$$

Eq. (14-7):

$$\sigma = \frac{K_v W^t P}{FY} = \frac{1.204(202.6)(12)}{0.75(0.296)} = 13\,185 \text{ psi} = 13.2 \text{ kpsi} \quad \text{Ans.}$$

14-3

$$d = mN = 1.25(18) = 22.5 \text{ mm}, \quad Y = 0.309$$

$$V = \frac{\pi(22.5)(10^{-3})(1800)}{60} = 2.121 \text{ m/s}$$

Eq. (14-6b): $K_v = \frac{6.1 + 2.121}{6.1} = 1.348$

$$W^t = \frac{60H}{\pi dn} = \frac{60(0.5)(10^3)}{\pi(22.5)(10^{-3})(1800)} = 235.8 \text{ N}$$

Eq. (14-8): $\sigma = \frac{K_v W^t}{FmY} = \frac{1.348(235.8)}{12(1.25)(0.309)} = 68.6 \text{ MPa} \quad \text{Ans.}$

14-4

$$d = 5(15) = 75 \text{ mm}, \quad Y = 0.290$$

$$V = \frac{\pi(75)(10^{-3})(200)}{60} = 0.7854 \text{ m/s}$$

Assume steel and apply Eq. (14-6b):

$$K_v = \frac{6.1 + 0.7854}{6.1} = 1.129$$

$$W^t = \frac{60H}{\pi dn} = \frac{60(5)(10^3)}{\pi(75)(10^{-3})(200)} = 6366 \text{ N}$$

Eq. (14-8):
$$\sigma = \frac{K_v W^t}{FmY} = \frac{1.129(6366)}{60(5)(0.290)} = 82.6 \text{ MPa} \quad \text{Ans.}$$

14-5

$$d = 1(16) = 16 \text{ mm}, \quad Y = 0.296$$

$$V = \frac{\pi(16)(10^{-3})(400)}{60} = 0.335 \text{ m/s}$$

Assume steel and apply Eq. (14-6b):

$$K_v = \frac{6.1 + 0.335}{6.1} = 1.055$$

$$W^t = \frac{60H}{\pi dn} = \frac{60(0.15)(10^3)}{\pi(16)(10^{-3})(400)} = 447.6 \text{ N}$$

Eq. (14-8):
$$F = \frac{K_v W^t}{\sigma m Y} = \frac{1.055(447.6)}{150(1)(0.296)} = 10.6 \text{ mm}$$

From Table A-17, use $F = 11 \text{ mm}$ Ans.

14-6

$$d = 1.5(17) = 25.5 \text{ mm}, \quad Y = 0.303$$

$$V = \frac{\pi(25.5)(10^{-3})(400)}{60} = 0.534 \text{ m/s}$$

Eq. (14-6b):
$$K_v = \frac{6.1 + 0.534}{6.1} = 1.088$$

$$W^t = \frac{60H}{\pi dn} = \frac{60(0.25)(10^3)}{\pi(25.5)(10^{-3})(400)} = 468 \text{ N}$$

Eq. (14-8):
$$F = \frac{K_v W^t}{\sigma m Y} = \frac{1.088(468)}{75(1.5)(0.303)} = 14.9 \text{ mm}$$

Use $F = 15 \text{ mm}$ Ans.

14-7

$$d = \frac{24}{5} = 4.8 \text{ in}, \quad Y = 0.337$$

$$V = \frac{\pi(4.8)(50)}{12} = 62.83 \text{ ft/min}$$

$$\text{Eq. (14-4b):} \quad K_v = \frac{1200 + 62.83}{1200} = 1.052$$

$$W^t = \frac{63\,025H}{nd/2} = \frac{63\,025(6)}{50(4.8/2)} = 3151 \text{ lbf}$$

$$\text{Eq. (14-7):} \quad F = \frac{K_v W^t P}{\sigma Y} = \frac{1.052(3151)(5)}{20(10^3)(0.337)} = 2.46 \text{ in}$$

Use $F = 2.5 \text{ in}$ Ans.**14-8**

$$d = \frac{16}{5} = 3.2 \text{ in}, \quad Y = 0.296$$

$$V = \frac{\pi(3.2)(600)}{12} = 502.7 \text{ ft/min}$$

$$\text{Eq. (14-4b):} \quad K_v = \frac{1200 + 502.7}{1200} = 1.419$$

$$W^t = \frac{63\,025(15)}{600(3.2/2)} = 984.8 \text{ lbf}$$

$$\text{Eq. (14-7):} \quad F = \frac{K_v W^t P}{\sigma Y} = \frac{1.419(984.8)(5)}{10(10^3)(0.296)} = 2.38 \text{ in}$$

Use $F = 2.5 \text{ in}$ Ans.**14-9** Try $P = 8$ which gives $d = 18/8 = 2.25 \text{ in}$ and $Y = 0.309$.

$$V = \frac{\pi(2.25)(600)}{12} = 353.4 \text{ ft/min}$$

$$\text{Eq. (14-4b):} \quad K_v = \frac{1200 + 353.4}{1200} = 1.295$$

$$W^t = \frac{63\,025(2.5)}{600(2.25/2)} = 233.4 \text{ lbf}$$

$$\text{Eq. (14-7):} \quad F = \frac{K_v W^t P}{\sigma Y} = \frac{1.295(233.4)(8)}{10(10^3)(0.309)} = 0.783 \text{ in}$$

Using coarse integer pitches from Table 13-2, the following table is formed.

P	d	V	K_v	W^t	F
2	9.000	1413.717	2.178	58.356	0.082
3	6.000	942.478	1.785	87.535	0.152
4	4.500	706.858	1.589	116.713	0.240
6	3.000	471.239	1.393	175.069	0.473
8	2.250	353.429	1.295	233.426	0.782
10	1.800	282.743	1.236	291.782	1.167
12	1.500	235.619	1.196	350.139	1.627
16	1.125	176.715	1.147	466.852	2.773

Other considerations may dictate the selection. Good candidates are $P = 8$ ($F = 7/8$ in) and $P = 10$ ($F = 1.25$ in). *Ans.*

14-10 Try $m = 2$ mm which gives $d = 2(18) = 36$ mm and $Y = 0.309$.

$$V = \frac{\pi(36)(10^{-3})(900)}{60} = 1.696 \text{ m/s}$$

Eq. (14-6b):
$$K_v = \frac{6.1 + 1.696}{6.1} = 1.278$$

$$W^t = \frac{60(1.5)(10^3)}{\pi(36)(10^{-3})(900)} = 884 \text{ N}$$

Eq. (14-8):
$$F = \frac{1.278(884)}{75(2)(0.309)} = 24.4 \text{ mm}$$

Using the preferred module sizes from Table 13-2:

m	d	V	K_v	W^t	F
1.00	18.0	0.848	1.139	1768.388	86.917
1.25	22.5	1.060	1.174	1414.711	57.324
1.50	27.0	1.272	1.209	1178.926	40.987
2.00	36.0	1.696	1.278	884.194	24.382
3.00	54.0	2.545	1.417	589.463	12.015
4.00	72.0	3.393	1.556	442.097	7.422
5.00	90.0	4.241	1.695	353.678	5.174
6.00	108.0	5.089	1.834	294.731	3.888
8.00	144.0	6.786	2.112	221.049	2.519
10.00	180.0	8.482	2.391	176.839	1.824
12.00	216.0	10.179	2.669	147.366	1.414
16.00	288.0	13.572	3.225	110.524	0.961
20.00	360.0	16.965	3.781	88.419	0.721
25.00	450.0	21.206	4.476	70.736	0.547
32.00	576.0	27.143	5.450	55.262	0.406
40.00	720.0	33.929	6.562	44.210	0.313
50.00	900.0	42.412	7.953	35.368	0.243

Other design considerations may dictate the size selection. For the present design, $m = 2$ mm ($F = 25$ mm) is a good selection. *Ans.*

14-11

$$d_P = \frac{22}{6} = 3.667 \text{ in}, \quad d_G = \frac{60}{6} = 10 \text{ in}$$

$$V = \frac{\pi(3.667)(1200)}{12} = 1152 \text{ ft/min}$$

$$\text{Eq. (14-4b):} \quad K_v = \frac{1200 + 1152}{1200} = 1.96$$

$$W^t = \frac{63\,025(15)}{1200(3.667/2)} = 429.7 \text{ lbf}$$

Table 14-8: $C_p = 2100\sqrt{\text{psi}}$ [Note: using Eq. (14-13) can result in wide variation in C_p due to wide variation in cast iron properties]

$$\text{Eq. (14-12):} \quad r_1 = \frac{3.667 \sin 20^\circ}{2} = 0.627 \text{ in}, \quad r_2 = \frac{10 \sin 20^\circ}{2} = 1.710 \text{ in}$$

$$\begin{aligned} \text{Eq. (14-14):} \quad \sigma_C &= -C_p \left[\frac{K_v W^t}{F \cos \phi} \left(\frac{1}{r_1} + \frac{1}{r_2} \right) \right]^{1/2} \\ &= -2100 \left[\frac{1.96(429.7)}{2 \cos 20^\circ} \left(\frac{1}{0.627} + \frac{1}{1.710} \right) \right]^{1/2} \\ &= -65.6(10^3) \text{ psi} = -65.6 \text{ kpsi} \quad \text{Ans.} \end{aligned}$$

14-12

$$d_P = \frac{16}{12} = 1.333 \text{ in}, \quad d_G = \frac{48}{12} = 4 \text{ in}$$

$$V = \frac{\pi(1.333)(700)}{12} = 244.3 \text{ ft/min}$$

$$\text{Eq. (14-4b):} \quad K_v = \frac{1200 + 244.3}{1200} = 1.204$$

$$W^t = \frac{63\,025(1.5)}{700(1.333/2)} = 202.6 \text{ lbf}$$

Table 14-8: $C_p = 2100\sqrt{\text{psi}}$ (see note in Prob. 14-11 solution)

$$\text{Eq. (14-12):} \quad r_1 = \frac{1.333 \sin 20^\circ}{2} = 0.228 \text{ in}, \quad r_2 = \frac{4 \sin 20^\circ}{2} = 0.684 \text{ in}$$

Eq. (14-14):

$$\sigma_C = -2100 \left[\frac{1.202(202.6)}{F \cos 20^\circ} \left(\frac{1}{0.228} + \frac{1}{0.684} \right) \right]^{1/2} = -100(10^3)$$

$$F = \left(\frac{2100}{100(10^3)} \right)^2 \left[\frac{1.202(202.6)}{\cos 20^\circ} \right] \left(\frac{1}{0.228} + \frac{1}{0.684} \right) = 0.668 \text{ in}$$

Use $F = 0.75 \text{ in}$ Ans.

14-13

$$d_P = \frac{24}{5} = 4.8 \text{ in}, \quad d_G = \frac{48}{5} = 9.6 \text{ in}$$

$$V = \frac{\pi(4.8)(50)}{12} = 62.83 \text{ ft/min}$$

$$\text{Eq. (14-4a):} \quad K_v = \frac{600 + 62.83}{600} = 1.105$$

$$W^t = \frac{63\,025H}{50(4.8/2)} = 525.2H$$

$$\text{Table 14-8:} \quad C_p = 1960\sqrt{\text{psi}} \quad (\text{see note in Prob. 14-11 solution})$$

$$\text{Eq. (14-12):} \quad r_1 = \frac{4.8 \sin 20^\circ}{2} = 0.821 \text{ in}, \quad r_2 = 2r_1 = 1.642 \text{ in}$$

$$\text{Eq. (14-14):} \quad -100(10^3) = -1960 \left[\frac{1.105(525.2H)}{2.5 \cos 20^\circ} \left(\frac{1}{0.821} + \frac{1}{1.642} \right) \right]^{1/2}$$

$$H = 5.77 \text{ hp} \quad \text{Ans.}$$

14-14

$$d_P = 4(20) = 80 \text{ mm}, \quad d_G = 4(32) = 128 \text{ mm}$$

$$V = \frac{\pi(80)(10^{-3})(1000)}{60} = 4.189 \text{ m/s}$$

$$\text{Eq. (14-6a):} \quad K_v = \frac{3.05 + 4.189}{3.05} = 2.373$$

$$W^t = \frac{60(10)(10^3)}{\pi(80)(10^{-3})(1000)} = 2387 \text{ N}$$

$$\text{Table 14-8:} \quad C_p = 163\sqrt{\text{MPa}} \quad (\text{see note in Prob. 14-11 solution})$$

$$\text{Eq. (14-12):} \quad r_1 = \frac{80 \sin 20^\circ}{2} = 13.68 \text{ mm}, \quad r_2 = \frac{128 \sin 20^\circ}{2} = 21.89 \text{ mm}$$

$$\text{Eq. (14-14):} \quad \sigma_C = -163 \left[\frac{2.373(2387)}{50 \cos 20^\circ} \left(\frac{1}{13.68} + \frac{1}{21.89} \right) \right]^{1/2} = -617 \text{ MPa} \quad \text{Ans.}$$

14-15 The pinion controls the design.

$$\text{Bending} \quad Y_P = 0.303, \quad Y_G = 0.359$$

$$d_P = \frac{17}{12} = 1.417 \text{ in}, \quad d_G = \frac{30}{12} = 2.500 \text{ in}$$

$$V = \frac{\pi d_P n}{12} = \frac{\pi(1.417)(525)}{12} = 194.8 \text{ ft/min}$$

$$\text{Eq. (14-4b):} \quad K_v = \frac{1200 + 194.8}{1200} = 1.162$$

$$\text{Eq. (6-8):} \quad S'_e = 0.5(76) = 38 \text{ kpsi}$$

$$\text{Eq. (6-19):} \quad k_a = 2.70(76)^{-0.265} = 0.857$$

$$l = \frac{2.25}{P_d} = \frac{2.25}{12} = 0.1875 \text{ in}$$

$$\text{Eq. (14-3): } x = \frac{3Y_P}{2P} = \frac{3(0.303)}{2(12)} = 0.0379 \text{ in}$$

$$\text{Eq. (b), p. 717: } t = \sqrt{4(0.1875)(0.0379)} = 0.1686 \text{ in}$$

$$\text{Eq. (6-25): } d_e = 0.808\sqrt{0.875(0.1686)} = 0.310 \text{ in}$$

$$\text{Eq. (6-20): } k_b = \left(\frac{0.310}{0.30}\right)^{-0.107} = 0.996$$

$$k_c = k_d = k_e = 1, \quad k_{f_1} = 1.66 \quad (\text{see Ex. 14-2})$$

$$r_f = \frac{0.300}{12} = 0.025 \text{ in} \quad (\text{see Ex. 14-2})$$

$$\frac{r}{d} = \frac{r_f}{t} = \frac{0.025}{0.1686} = 0.148$$

Approximate $D/d = \infty$ with $D/d = 3$; from Fig. A-15-6, $K_t = 1.68$.

From Fig. 6-20, with $S_{ut} = 76$ kpsi and $r = 0.025$ in, $q = 0.62$. From Eq. (6-32)

$$K_f = 1 + 0.62(1.68 - 1) = 1.42$$

Miscellaneous-Effects Factor:

$$k_f = k_{f_1}k_{f_2} = 1.65 \left(\frac{1}{1.323}\right) = 1.247$$

$$\text{Eq. (7-17): } S_e = 0.857(0.996)(1)(1)(1)(1.247)(38\,000) \\ = 40\,450 \text{ psi}$$

$$\sigma_{\text{all}} = \frac{40\,770}{2.25} = 18\,120 \text{ psi}$$

$$W^t = \frac{FY_P\sigma_{\text{all}}}{K_v P_d} = \frac{0.875(0.303)(18\,120)}{1.162(12)} \\ = 345 \text{ lbf}$$

$$H = \frac{345(194.8)}{33\,000} = 2.04 \text{ hp} \quad \text{Ans.}$$

Wear

$$v_1 = v_2 = 0.292, \quad E_1 = E_2 = 30(10^6) \text{ psi}$$

$$\text{Eq. (14-13): } C_P = \left[\frac{1}{2\pi \left(\frac{1 - 0.292^2}{30(10^6)}\right)} \right] = 2285\sqrt{\text{psi}}$$

$$\text{Eq. (14-12): } r_1 = \frac{d_P}{2} \sin \phi = \frac{1.417}{2} \sin 20^\circ = 0.242 \text{ in}$$

$$r_2 = \frac{d_G}{2} \sin \phi = \frac{2.500}{2} \sin 20^\circ = 0.428$$

$$\frac{1}{r_1} + \frac{1}{r_2} = \frac{1}{0.242} + \frac{1}{0.428} = 6.469 \text{ in}^{-1}$$

From Eq. (6-68),

$$\begin{aligned}(S_C)_{10^8} &= 0.4H_B - 10 \text{ kpsi} \\ &= [0.4(149) - 10](10^3) = 49\,600 \text{ psi}\end{aligned}$$

$$\sigma_{C,\text{all}} = -\frac{(S_C)_{10^8}}{\sqrt{n}} = \frac{-49\,600}{\sqrt{2.25}} = -33\,067 \text{ psi}$$

Eq. (14-14):
$$W^t = \left(\frac{-33\,067}{2285}\right)^2 \left[\frac{0.875 \cos 20^\circ}{1.162(6.469)}\right] = 22.6 \text{ lbf}$$

$$H = \frac{22.6(194.8)}{33\,000} = 0.133 \text{ hp} \quad \text{Ans.}$$

Rating power (pinion controls):

$$H_1 = 2.04 \text{ hp}$$

$$H_2 = 0.133 \text{ hp}$$

$$H_{\text{all}} = (\min 2.04, 0.133) = 0.133 \text{ hp} \quad \text{Ans.}$$

14-16 See Prob. 14-15 solution for equation numbers.

Pinion controls: $Y_P = 0.322$, $Y_G = 0.447$

Bending $d_P = 20/3 = 6.667 \text{ in}$, $d_G = 33.333 \text{ in}$

$$V = \pi d_P n / 12 = \pi(6.667)(870) / 12 = 1519 \text{ ft/min}$$

$$K_v = (1200 + 1519) / 1200 = 2.266$$

$$S'_e = 0.5(113) = 56.5 \text{ kpsi}$$

$$k_a = 2.70(113)^{-0.265} = 0.771$$

$$l = 2.25 / P_d = 2.25 / 3 = 0.75 \text{ in}$$

$$x = 3(0.322) / [2(3)] = 0.161 \text{ in}$$

$$t = \sqrt{4(0.75)(0.161)} = 0.695 \text{ in}$$

$$d_e = 0.808 \sqrt{2.5(0.695)} = 1.065 \text{ in}$$

$$k_b = (1.065 / 0.30)^{-0.107} = 0.873$$

$$k_c = k_d = k_e = 1$$

$$r_f = 0.300 / 3 = 0.100 \text{ in}$$

$$\frac{r}{d} = \frac{r_f}{t} = \frac{0.100}{0.695} = 0.144$$

From Table A-15-6, $K_t = 1.75$; Fig. 6-20, $q = 0.85$; Eq. (6-32), $K_f = 1.64$

$$k_{f2} = 1 / 1.597, \quad k_f = k_{f1} k_{f2} = 1.66 / 1.597 = 1.039$$

$$S_e = 0.771(0.873)(1)(1)(1)(1.039)(56\,500) = 39\,500 \text{ psi}$$

$$\sigma_{\text{all}} = S_e / n = 39\,500 / 1.5 = 26\,330 \text{ psi}$$

$$W^t = \frac{F Y_P \sigma_{\text{all}}}{K_v P_d} = \frac{2.5(0.322)(26\,330)}{2.266(3)} = 3118 \text{ lbf}$$

$$H = W^t V / 33\,000 = 3118(1519) / 33\,000 = 144 \text{ hp} \quad \text{Ans.}$$

Wear

$$\text{Eq. (14-13): } C_p = 2285\sqrt{\text{psi}}$$

$$\text{Eq. (14-12): } r_1 = (6.667/2) \sin 20^\circ = 1.140 \text{ in}$$

$$r_2 = (33.333/2) \sin 20^\circ = 5.700 \text{ in}$$

$$\text{Eq. (6-68): } S_C = [0.4(262) - 10](10^3) = 94\,800 \text{ psi}$$

$$\sigma_{C,\text{all}} = -S_C/\sqrt{n_d} = -94\,800/\sqrt{1.5} = -77\,404 \text{ psi}$$

$$\begin{aligned} W^t &= \left(\frac{\sigma_{C,\text{all}}}{C_p}\right)^2 \frac{F \cos \phi}{K_v} \frac{1}{1/r_1 + 1/r_2} \\ &= \left(\frac{-77\,404}{2300}\right)^2 \left(\frac{2.5 \cos 20^\circ}{2.266}\right) \left(\frac{1}{1/1.140 + 1/5.700}\right) \\ &= 1115 \text{ lbf} \end{aligned}$$

$$H = \frac{W^t V}{33\,000} = \frac{1115(1519)}{33\,000} = 51.3 \text{ hp} \quad \text{Ans.}$$

For 10^8 cycles (revolutions of the pinion), the power based on wear is 51.3 hp.

Rating power–pinion controls

$$H_1 = 144 \text{ hp}$$

$$H_2 = 51.3 \text{ hp}$$

$$H_{\text{rated}} = \min(144, 51.3) = 51.3 \text{ hp} \quad \text{Ans.}$$

14-17 Given: $\phi = 20^\circ$, $n = 1145 \text{ rev/min}$, $m = 6 \text{ mm}$, $F = 75 \text{ mm}$, $N_P = 16$ milled teeth, $N_G = 30T$, $S_{ut} = 900 \text{ MPa}$, $H_B = 260$, $n_d = 3$, $Y_P = 0.296$, and $Y_G = 0.359$.

Pinion bending

$$d_P = mN_P = 6(16) = 96 \text{ mm}$$

$$d_G = 6(30) = 180 \text{ mm}$$

$$V = \frac{\pi d_P n}{12} = \frac{\pi(96)(1145)(10^{-3})(12)}{(12)(60)} = 5.76 \text{ m/s}$$

$$\text{Eq. (14-6b): } K_v = \frac{6.1 + 5.76}{6.1} = 1.944$$

$$S'_e = 0.5(900) = 450 \text{ MPa}$$

$$a = 4.45, \quad b = -0.265$$

$$k_a = 4.51(900)^{-0.265} = 0.744$$

$$l = 2.25m = 2.25(6) = 13.5 \text{ mm}$$

$$x = 3Ym/2 = 3(0.296)6/2 = 2.664 \text{ mm}$$

$$t = \sqrt{4lx} = \sqrt{4(13.5)(2.664)} = 12.0 \text{ mm}$$

$$d_e = 0.808\sqrt{75(12.0)} = 24.23 \text{ mm}$$

$$k_b = \left(\frac{24.23}{7.62} \right)^{-0.107} = 0.884$$

$$k_c = k_d = k_e = 1$$

$$r_f = 0.300m = 0.300(6) = 1.8 \text{ mm}$$

From Fig. A-15-6 for $r/d = r_f/t = 1.8/12 = 0.15$, $K_t = 1.68$.

Figure 6-20, $q = 0.86$; Eq. (6-32),

$$K_f = 1 + 0.86(1.68 - 1) = 1.58$$

$$k_{f1} = 1.66 \quad (\text{Gerber failure criterion})$$

$$k_{f2} = 1/K_f = 1/1.537 = 0.651$$

$$k_f = k_{f1}k_{f2} = 1.66(0.651) = 1.08$$

$$S_e = 0.744(0.884)(1)(1)(1)(1.08)(450) = 319.6 \text{ MPa}$$

$$\sigma_{\text{all}} = \frac{S_e}{n_d} = \frac{319.6}{1.3} = 245.8 \text{ MPa}$$

$$\text{Eq. (14-8): } W^t = \frac{FYm\sigma_{\text{all}}}{K_v} = \frac{75(0.296)(6)(245.8)}{1.944} = 16\,840 \text{ N}$$

$$H = \frac{Tn}{9.55} = \frac{16\,840(96/2)(1145)}{9.55(10^6)} = 96.9 \text{ kW} \quad \text{Ans.}$$

Wear: Pinion and gear

$$\text{Eq. (14-12): } r_1 = (96/2) \sin 20^\circ = 16.42 \text{ mm}$$

$$r_2 = (180/2) \sin 20^\circ = 30.78 \text{ mm}$$

Eq. (14-13), with $E = 207(10^3) \text{ MPa}$ and $\nu = 0.292$, gives

$$C_p = \left[\frac{1}{2\pi(1 - 0.292^2)/(207 \times 10^3)} \right] = 190\sqrt{\text{MPa}}$$

$$\text{Eq. (6-68): } S_C = 6.89[0.4(260) - 10] = 647.7 \text{ MPa}$$

$$\sigma_{C,\text{all}} = -\frac{S_C}{\sqrt{n}} = -\frac{647.7}{\sqrt{1.3}} = -568 \text{ MPa}$$

$$\begin{aligned} \text{Eq. (14-14): } W^t &= \left(\frac{\sigma_{C,\text{all}}}{C_p} \right)^2 \frac{F \cos \phi}{K_v} \frac{1}{1/r_1 + 1/r_2} \\ &= \left(\frac{-568}{191} \right)^2 \left(\frac{75 \cos 20^\circ}{1.944} \right) \left(\frac{1}{1/16.42 + 1/30.78} \right) \\ &= 3433 \text{ N} \end{aligned}$$

$$T = \frac{W^t d_P}{2} = \frac{3433(96)}{2} = 164\,784 \text{ N} \cdot \text{mm} = 164.8 \text{ N} \cdot \text{m}$$

$$H = \frac{Tn}{9.55} = \frac{164.8(1145)}{9.55} = 19\,758.7 \text{ W} = 19.8 \text{ kW} \quad \text{Ans.}$$

Thus, wear controls the gearset power rating; $H = 19.8 \text{ kW}$. *Ans.*

14-18 Preliminaries: $N_P = 17$, $N_G = 51$

$$d_P = \frac{N}{P_d} = \frac{17}{6} = 2.833 \text{ in}$$

$$d_G = \frac{51}{6} = 8.500 \text{ in}$$

$$V = \pi d_P n / 12 = \pi(2.833)(1120) / 12 = 830.7 \text{ ft/min}$$

Eq. (14-4b): $K_v = (1200 + 830.7) / 1200 = 1.692$

$$\sigma_{\text{all}} = \frac{S_y}{n_d} = \frac{90\,000}{2} = 45\,000 \text{ psi}$$

Table 14-2: $Y_P = 0.303$, $Y_G = 0.410$

Eq. (14-7): $W^t = \frac{F Y_P \sigma_{\text{all}}}{K_v P_d} = \frac{2(0.303)(45\,000)}{1.692(6)} = 2686 \text{ lbf}$

$$H = \frac{W^t V}{33\,000} = \frac{2686(830.7)}{33\,000} = 67.6 \text{ hp}$$

Based on yielding in bending, the power is 67.6 hp.

(a) Pinion fatigue

Bending

Eq. (2-17): $S_{ut} \doteq 0.5H_B = 0.5(232) = 116 \text{ kpsi}$

Eq. (6-8): $S'_e = 0.5S_{ut} = 0.5(116) = 58 \text{ kpsi}$

Eq. (6-19): $a = 2.70$, $b = -0.265$, $k_a = 2.70(116)^{-0.265} = 0.766$

Table 13-1: $l = \frac{1}{P_d} + \frac{1.25}{P_d} = \frac{2.25}{P_d} = \frac{2.25}{6} = 0.375 \text{ in}$

Eq. (14-3): $x = \frac{3Y_P}{2P_d} = \frac{3(0.303)}{2(6)} = 0.0758$

Eq. (b), p. 717: $t = \sqrt{4lx} = \sqrt{4(0.375)(0.0758)} = 0.337 \text{ in}$

Eq. (6-25): $d_e = 0.808\sqrt{Ft} = 0.808\sqrt{2(0.337)} = 0.663 \text{ in}$

Eq. (6-20): $k_b = \left(\frac{0.663}{0.30}\right)^{-0.107} = 0.919$

$k_c = k_d = k_e = 1$. Assess two components contributing to k_f . First, based upon one-way bending and the Gerber failure criterion, $k_{f1} = 1.66$ (see Ex. 14-2). Second, due to stress-concentration,

$$r_f = \frac{0.300}{P_d} = \frac{0.300}{6} = 0.050 \text{ in} \quad (\text{see Ex. 14-2})$$

Fig. A-15-6: $\frac{r}{d} = \frac{r_f}{t} = \frac{0.05}{0.338} = 0.148$

Estimate $D/d = \infty$ by setting $D/d = 3$, $K_t = 1.68$. From Fig. 6-20, $q = 0.86$, and Eq. (6-32)

$$K_f = 1 + 0.86(1.68 - 1) = 1.58$$

$$k_{f2} = \frac{1}{K_f} = \frac{1}{1.58} = 0.633$$

$$k_f = k_{f1}k_{f2} = 1.66(0.633) = 1.051$$

$$S_e = 0.766(0.919)(1)(1)(1)(1.051)(58) = 42.9 \text{ kpsi}$$

$$\sigma_{\text{all}} = \frac{S_e}{n_d} = \frac{42.9}{2} = 21.5 \text{ kpsi}$$

$$W^t = \frac{F Y_P \sigma_{\text{all}}}{K_v P_d} = \frac{2(0.303)(21\,500)}{1.692(6)} = 1283 \text{ lbf}$$

$$H = \frac{W^t V}{33\,000} = \frac{1283(830.7)}{33\,000} = 32.3 \text{ hp} \quad \text{Ans.}$$

(b) Pinion fatigue

Wear

From Table A-5 for steel: $\nu = 0.292$, $E = 30(10^6)$ psi

Eq. (14-13) or Table 14-8:

$$C_p = \left\{ \frac{1}{2\pi[(1 - 0.292^2)/30(10^6)]} \right\}^{1/2} = 2285\sqrt{\text{psi}}$$

In preparation for Eq. (14-14):

$$\text{Eq. (14-12):} \quad r_1 = \frac{d_P}{2} \sin \phi = \frac{2.833}{2} \sin 20^\circ = 0.485 \text{ in}$$

$$r_2 = \frac{d_G}{2} \sin \phi = \frac{8.500}{2} \sin 20^\circ = 1.454 \text{ in}$$

$$\left(\frac{1}{r_1} + \frac{1}{r_2} \right) = \frac{1}{0.485} + \frac{1}{1.454} = 2.750 \text{ in}$$

$$\text{Eq. (6-68):} \quad (S_C)_{10^8} = 0.4H_B - 10 \text{ kpsi}$$

In terms of gear notation

$$\sigma_C = [0.4(232) - 10]10^3 = 82\,800 \text{ psi}$$

We will introduce the design factor of $n_d = 2$ and because it is a contact stress apply it to the load W^t by dividing by $\sqrt{2}$.

$$\sigma_{C,\text{all}} = -\frac{\sigma_C}{\sqrt{2}} = -\frac{82\,800}{\sqrt{2}} = -58\,548 \text{ psi}$$

Solve Eq. (14-14) for W^t :

$$W^t = \left(\frac{-58\,548}{2285} \right)^2 \left[\frac{2 \cos 20^\circ}{1.692(2.750)} \right] = 265 \text{ lbf}$$

$$H_{\text{all}} = \frac{265(830.7)}{33\,000} = 6.67 \text{ hp} \quad \text{Ans.}$$

For 10^8 cycles (turns of pinion), the allowable power is 6.67 hp.

(c) Gear fatigue due to bending and wear

Bending

Eq. (14-3):
$$x = \frac{3Y_G}{2P_d} = \frac{3(0.4103)}{2(6)} = 0.1026 \text{ in}$$

Eq. (b), p. 717:
$$t = \sqrt{4(0.375)(0.1026)} = 0.392 \text{ in}$$

Eq. (6-25):
$$d_e = 0.808\sqrt{2(0.392)} = 0.715 \text{ in}$$

Eq. (6-20):
$$k_b = \left(\frac{0.715}{0.30} \right)^{-0.107} = 0.911$$

$$k_c = k_d = k_e = 1$$

$$\frac{r}{d} = \frac{r_f}{t} = \frac{0.050}{0.392} = 0.128$$

Approximate $D/d = \infty$ by setting $D/d = 3$ for Fig. A-15-6; $K_t = 1.80$. Use $K_f = 1.80$.

$$k_{f2} = \frac{1}{1.80} = 0.556, \quad k_f = 1.66(0.556) = 0.923$$

$$S_e = 0.766(0.911)(1)(1)(1)(0.923)(58) = 37.36 \text{ kpsi}$$

$$\sigma_{\text{all}} = \frac{S_e}{n_d} = \frac{37.36}{2} = 18.68 \text{ kpsi}$$

$$W^t = \frac{FY_G\sigma_{\text{all}}}{K_v - P_d} = \frac{2(0.4103)(18\,680)}{1.692(6)} = 1510 \text{ lbf}$$

$$H_{\text{all}} = \frac{1510(830.7)}{33\,000} = 38.0 \text{ hp} \quad \text{Ans.}$$

The gear is thus stronger than the pinion in bending.

Wear Since the material of the pinion and the gear are the same, and the contact stresses are the same, the allowable power transmission of both is the same. Thus, $H_{\text{all}} = 6.67 \text{ hp}$ for 10^8 revolutions of each. As yet, we have no way to establish S_C for $10^8/3$ revolutions.

(d) Pinion bending: $H_1 = 32.3$ hp

Pinion wear: $H_2 = 6.67$ hp

Gear bending: $H_3 = 38.0$ hp

Gear wear: $H_4 = 6.67$ hp

Power rating of the gear set is thus

$$H_{\text{rated}} = \min(32.3, 6.67, 38.0, 6.67) = 6.67 \text{ hp} \quad \text{Ans.}$$

14-19 $d_P = 16/6 = 2.667$ in, $d_G = 48/6 = 8$ in

$$V = \frac{\pi(2.667)(300)}{12} = 209.4 \text{ ft/min}$$

$$W^t = \frac{33\,000(5)}{209.4} = 787.8 \text{ lbf}$$

Assuming uniform loading, $K_o = 1$. From Eq. (14-28),

$$Q_v = 6, \quad B = 0.25(12 - 6)^{2/3} = 0.8255$$

$$A = 50 + 56(1 - 0.8255) = 59.77$$

Eq. (14-27):

$$K_v = \left(\frac{59.77 + \sqrt{209.4}}{59.77} \right)^{0.8255} = 1.196$$

From Table 14-2,

$$N_P = 16T, \quad Y_P = 0.296$$

$$N_G = 48T, \quad Y_G = 0.4056$$

From Eq. (a), Sec. 14-10 with $F = 2$ in

$$(K_s)_P = 1.192 \left(\frac{2\sqrt{0.296}}{6} \right)^{0.0535} = 1.088$$

$$(K_s)_G = 1.192 \left(\frac{2\sqrt{0.4056}}{6} \right)^{0.0535} = 1.097$$

From Eq. (14-30) with $C_{mc} = 1$

$$C_{pf} = \frac{2}{10(2.667)} - 0.0375 + 0.0125(2) = 0.0625$$

$$C_{pm} = 1, \quad C_{ma} = 0.093 \quad (\text{Fig. 14-11}), \quad C_e = 1$$

$$K_m = 1 + 1[0.0625(1) + 0.093(1)] = 1.156$$

Assuming constant thickness of the gears $\rightarrow K_B = 1$

$$m_G = N_G/N_P = 48/16 = 3$$

With N (pinion) = 10^8 cycles and N (gear) = $10^8/3$, Fig. 14-14 provides the relations:

$$(Y_N)_P = 1.3558(10^8)^{-0.0178} = 0.977$$

$$(Y_N)_G = 1.3558(10^8/3)^{-0.0178} = 0.996$$

Fig. 14-6: $J_P = 0.27, \quad J_G = 0.38$

From Table 14-10 for $R = 0.9, K_R = 0.85$

$$K_T = C_f = 1$$

Eq. (14-23) with $m_N = 1 \quad I = \frac{\cos 20^\circ \sin 20^\circ}{2} \left(\frac{3}{3+1} \right) = 0.1205$

Table 14-8: $C_p = 2300\sqrt{\text{psi}}$

Strength: Grade 1 steel with $H_{BP} = H_{BG} = 200$

Fig. 14-2: $(S_t)_P = (S_t)_G = 77.3(200) + 12\,800 = 28\,260 \text{ psi}$

Fig. 14-5: $(S_c)_P = (S_c)_G = 322(200) + 29\,100 = 93\,500 \text{ psi}$

Fig. 14-15: $(Z_N)_P = 1.4488(10^8)^{-0.023} = 0.948$

$$(Z_N)_G = 1.4488(10^8/3)^{-0.023} = 0.973$$

Fig. 14-12: $H_{BP}/H_{BG} = 1 \quad \therefore C_H = 1$

Pinion tooth bending

Eq. (14-15):

$$\begin{aligned} (\sigma)_P &= W^t K_o K_v K_s \frac{P_d K_m K_B}{F J} = 787.8(1)(1.196)(1.088) \left(\frac{6}{2} \right) \left[\frac{(1.156)(1)}{0.27} \right] \\ &= 13\,167 \text{ psi} \quad \text{Ans.} \end{aligned}$$

Factor of safety from Eq. (14-41)

$$(S_F)_P = \left[\frac{S_t Y_N / (K_T K_R)}{\sigma} \right] = \frac{28\,260(0.977) / [(1)(0.85)]}{13\,167} = 2.47 \quad \text{Ans.}$$

Gear tooth bending

$$(\sigma)_G = 787.8(1)(1.196)(1.097) \left(\frac{6}{2} \right) \left[\frac{(1.156)(1)}{0.38} \right] = 9433 \text{ psi} \quad \text{Ans.}$$

$$(S_F)_G = \frac{28\,260(0.996) / [(1)(0.85)]}{9433} = 3.51 \quad \text{Ans.}$$

Pinion tooth wear

$$\begin{aligned} \text{Eq. (14-16): } (\sigma_c)_P &= C_p \left(W^t K_o K_v K_s \frac{K_m C_f}{d_P F I} \right)_P^{1/2} \\ &= 2300 \left[787.8(1)(1.196)(1.088) \left(\frac{1.156}{2.667(2)} \right) \left(\frac{1}{0.1205} \right) \right]^{1/2} \\ &= 98\,760 \text{ psi} \quad \text{Ans.} \end{aligned}$$

Eq. (14-42):

$$(S_H)_P = \left[\frac{S_c Z_N / (K_T K_R)}{\sigma_c} \right]_P = \left\{ \frac{93\,500(0.948) / [(1)(0.85)]}{98\,760} \right\} = 1.06 \quad \text{Ans.}$$

Gear tooth wear

$$(\sigma_c)_G = \left[\frac{(K_s)_G}{(K_s)_P} \right]^{1/2} (\sigma_c)_P = \left(\frac{1.097}{1.088} \right)^{1/2} (98\,760) = 99\,170 \text{ psi} \quad \text{Ans.}$$

$$(S_H)_G = \frac{93\,500(0.973)(1)/[(1)(0.85)]}{99\,170} = 1.08 \quad \text{Ans.}$$

The hardness of the pinion and the gear should be increased.

14-20 $d_P = 2.5(20) = 50 \text{ mm}$, $d_G = 2.5(36) = 90 \text{ mm}$

$$V = \frac{\pi d_P n_P}{60} = \frac{\pi(50)(10^{-3})(100)}{60} = 0.2618 \text{ m/s}$$

$$W^t = \frac{60(120)}{\pi(50)(10^{-3})(100)} = 458.4 \text{ N}$$

Eq. (14-28): $K_o = 1$, $Q_v = 6$, $B = 0.25(12 - 6)^{2/3} = 0.8255$

$$A = 50 + 56(1 - 0.8255) = 59.77$$

Eq. (14-27): $K_v = \left[\frac{59.77 + \sqrt{200(0.2618)}}{59.77} \right]^{0.8255} = 1.099$

Table 14-2: $Y_P = 0.322$, $Y_G = 0.3775$

Similar to Eq. (a) of Sec. 14-10 but for SI units:

$$K_s = \frac{1}{k_b} = 0.8433(mF\sqrt{Y})^{0.0535}$$

$$(K_s)_P = 0.8433[2.5(18)\sqrt{0.322}]^{0.0535} = 1.003 \quad \text{use 1}$$

$$(K_s)_G = 0.8433[2.5(18)\sqrt{0.3775}]^{0.0535} > 1 \quad \text{use 1}$$

$$C_{mc} = 1, \quad F = 18/25.4 = 0.709 \text{ in}, \quad C_{pf} = \frac{18}{10(50)} - 0.025 = 0.011$$

$$C_{pm} = 1, \quad C_{ma} = 0.247 + 0.0167(0.709) - 0.765(10^{-4})(0.709^2) = 0.259$$

$$C_e = 1$$

$$K_H = 1 + 1[0.011(1) + 0.259(1)] = 1.27$$

Eq. (14-40): $K_B = 1$, $m_G = N_G/N_P = 36/20 = 1.8$

Fig. 14-14: $(Y_N)_P = 1.3558(10^8)^{-0.0178} = 0.977$

$$(Y_N)_G = 1.3558(10^8/1.8)^{-0.0178} = 0.987$$

Fig. 14-6: $(Y_J)_P = 0.33$, $(Y_J)_G = 0.38$

Eq. (14-38): $Y_Z = 0.658 - 0.0759 \ln(1 - 0.95) = 0.885$

Sec. 14-15: $Y_\theta = Z_R = 1$

Eq. (14-23) with $m_N = 1$:

$$Z_I = \frac{\cos 20^\circ \sin 20^\circ}{2} \left(\frac{1.8}{1.8 + 1} \right) = 0.103$$

Table 14-8: $Z_E = 191\sqrt{\text{MPa}}$

Strength Grade 1 steel, given $H_{BP} = H_{BG} = 200$

Fig. 14-2: $(\sigma_{FP})_P = (\sigma_{FP})_G = 0.533(200) + 88.3 = 194.9 \text{ MPa}$

Fig. 14-5: $(\sigma_{HP})_P = (\sigma_{HP})_G = 2.22(200) + 200 = 644 \text{ MPa}$

Fig. 14-15: $(Z_N)_P = 1.4488(10^8)^{-0.023} = 0.948$

$$(Z_N)_G = 1.4488(10^8/1.8)^{-0.023} = 0.961$$

Fig. 14-12: $H_{BP}/H_{BG} = 1 \quad \therefore Z_W = 1$

Pinion tooth bending

$$\begin{aligned} (\sigma)_P &= \left(W^t K_o K_v K_s \frac{1}{b m_t} \frac{K_H K_B}{Y_J} \right)_P \\ &= 458.4(1)(1.099)(1) \left[\frac{1}{18(2.5)} \right] \left[\frac{1.27(1)}{0.33} \right] = 43.08 \text{ MPa} \quad \text{Ans.} \end{aligned}$$

$$\text{Eq. (14-41): } (S_F)_P = \left(\frac{\sigma_{FP}}{\sigma} \frac{Y_N}{Y_\theta Y_Z} \right)_P = \frac{194.9}{43.08} \left[\frac{0.977}{1(0.885)} \right] = 4.99 \quad \text{Ans.}$$

Gear tooth bending

$$\text{Eq. (14-15): } (\sigma)_G = 458.4(1)(1.099)(1) \left[\frac{1}{18(2.5)} \right] \left[\frac{1.27(1)}{0.38} \right] = 37.42 \text{ MPa} \quad \text{Ans.}$$

$$(S_F)_G = \frac{194.9}{37.42} \left[\frac{0.987}{1(0.885)} \right] = 5.81 \quad \text{Ans.}$$

Pinion tooth wear

$$\begin{aligned} \text{Eq. (14-16): } (\sigma_c)_P &= \left(Z_E \sqrt{W^t K_o K_v K_s \frac{K_H Z_R}{d_{w1} b Z_I}} \right)_P \\ &= 191 \sqrt{458.4(1)(1.099)(1) \left[\frac{1.27}{50(18)} \right] \left[\frac{1}{0.103} \right]} = 501.8 \text{ MPa} \quad \text{Ans.} \end{aligned}$$

$$\text{Eq. (14-42): } (S_H)_P = \left(\frac{\sigma_{HP}}{\sigma_c} \frac{Z_N Z_W}{Y_\theta Y_Z} \right)_P = \frac{644}{501.8} \left[\frac{0.948(1)}{1(0.885)} \right] = 1.37 \quad \text{Ans.}$$

Gear tooth wear

$$(\sigma_c)_G = \left[\frac{(K_s)_G}{(K_s)_P} \right]^{1/2} (\sigma_c)_P = \left(\frac{1}{1} \right)^{1/2} (501.8) = 501.8 \text{ MPa} \quad \text{Ans.}$$

$$(S_H)_G = \frac{644}{501.8} \left[\frac{0.961(1)}{1(0.885)} \right] = 1.39 \quad \text{Ans.}$$

14-21

$$P_t = P_n \cos \psi = 6 \cos 30^\circ = 5.196 \text{ teeth/in}$$

$$d_P = \frac{16}{5.196} = 3.079 \text{ in}, \quad d_G = \frac{48}{16}(3.079) = 9.238 \text{ in}$$

$$V = \frac{\pi(3.079)(300)}{12} = 241.8 \text{ ft/min}$$

$$W^t = \frac{33\,000(5)}{241.8} = 682.3 \text{ lbf}, \quad K_v = \left(\frac{59.77 + \sqrt{241.8}}{59.77} \right)^{0.8255} = 1.210$$

From Prob. 14-19:

$$Y_P = 0.296, \quad Y_G = 0.4056$$

$$(K_s)_P = 1.088, \quad (K_s)_G = 1.097, \quad K_B = 1$$

$$m_G = 3, \quad (Y_N)_P = 0.977, \quad (Y_N)_G = 0.996, \quad K_R = 0.85$$

$$(S_t)_P = (S_t)_G = 28\,260 \text{ psi}, \quad C_H = 1, \quad (S_c)_P = (S_c)_G = 93\,500 \text{ psi}$$

$$(Z_N)_P = 0.948, \quad (Z_N)_G = 0.973, \quad C_p = 2300\sqrt{\text{psi}}$$

The pressure angle is:

$$\text{Eq. (13-19):} \quad \phi_t = \tan^{-1} \left(\frac{\tan 20^\circ}{\cos 30^\circ} \right) = 22.80^\circ$$

$$(r_b)_P = \frac{3.079}{2} \cos 22.8^\circ = 1.419 \text{ in}, \quad (r_b)_G = 3(r_b)_P = 4.258 \text{ in}$$

$$a = 1/P_n = 1/6 = 0.167 \text{ in}$$

Eq. (14-25):

$$Z = \left[\left(\frac{3.079}{2} + 0.167 \right)^2 - 1.419^2 \right]^{1/2} + \left[\left(\frac{9.238}{2} + 0.167 \right)^2 - 4.258^2 \right]^{1/2}$$

$$- \left(\frac{3.079}{2} + \frac{9.238}{2} \right) \sin 22.8^\circ$$

$$= 0.9479 + 2.1852 - 2.3865 = 0.7466 \quad \text{Conditions O.K. for use}$$

$$p_N = p_n \cos \phi_n = \frac{\pi}{6} \cos 20^\circ = 0.4920 \text{ in}$$

$$\text{Eq. (14-21):} \quad m_N = \frac{p_N}{0.95Z} = \frac{0.492}{0.95(0.7466)} = 0.6937$$

$$\text{Eq. (14-23):} \quad I = \left[\frac{\sin 22.8^\circ \cos 22.8^\circ}{2(0.6937)} \right] \left(\frac{3}{3+1} \right) = 0.193$$

$$\text{Fig. 14-7:} \quad J'_P \doteq 0.45, \quad J'_G \doteq 0.54$$

Fig. 14-8: Corrections are 0.94 and 0.98

$$J_P = 0.45(0.94) = 0.423, \quad J_G = 0.54(0.98) = 0.529$$

$$C_{mc} = 1, \quad C_{pf} = \frac{2}{10(3.079)} - 0.0375 + 0.0125(2) = 0.0525$$

$$C_{pm} = 1, \quad C_{ma} = 0.093, \quad C_e = 1$$

$$K_m = 1 + (1)[0.0525(1) + 0.093(1)] = 1.146$$

Pinion tooth bending

$$(\sigma)_P = 682.3(1)(1.21)(1.088) \left(\frac{5.196}{2} \right) \left[\frac{1.146(1)}{0.423} \right] = 6323 \text{ psi Ans.}$$

$$(S_F)_P = \frac{28\,260(0.977)/[1(0.85)]}{6323} = 5.14 \text{ Ans.}$$

Gear tooth bending

$$(\sigma)_G = 682.3(1)(1.21)(1.097) \left(\frac{5.196}{2} \right) \left[\frac{1.146(1)}{0.529} \right] = 5097 \text{ psi Ans.}$$

$$(S_F)_G = \frac{28\,260(0.996)/[1(0.85)]}{5097} = 6.50 \text{ Ans.}$$

Pinion tooth wear

$$(\sigma_c)_P = 2300 \left\{ 682.3(1)(1.21)(1.088) \left[\frac{1.146}{3.078(2)} \right] \left(\frac{1}{0.193} \right) \right\}^{1/2} = 67\,700 \text{ psi Ans.}$$

$$(S_H)_P = \frac{93\,500(0.948)/[(1)(0.85)]}{67\,700} = 1.54 \text{ Ans.}$$

Gear tooth wear

$$(\sigma_c)_G = \left[\frac{1.097}{1.088} \right]^{1/2} (67\,700) = 67\,980 \text{ psi Ans.}$$

$$(S_H)_G = \frac{93\,500(0.973)/[(1)(0.85)]}{67\,980} = 1.57 \text{ Ans.}$$

14-22 Given: $N_P = 17T$, $N_G = 51T$, $R = 0.99$ at 10^8 cycles, $H_B = 232$ through-hardening Grade 1, core and case, both gears.

Table 14-2: $Y_P = 0.303$, $Y_G = 0.4103$

Fig. 14-6: $J_P = 0.292$, $J_G = 0.396$

$$d_P = N_P/P = 17/6 = 2.833 \text{ in}, \quad d_G = 51/6 = 8.5 \text{ in}$$

Pinion bending

From Fig. 14-2:

$${}_{0.99}(S_t)_{10^7} = 77.3H_B + 12\,800$$

$$= 77.3(232) + 12\,800 = 30\,734 \text{ psi}$$

Fig. 14-14:

$$Y_N = 1.6831(10^8)^{-0.0323} = 0.928$$

$$V = \pi d p n / 12 = \pi(2.833)(1120/12) = 830.7 \text{ ft/min}$$

$$K_T = K_R = 1, \quad S_F = 2, \quad S_H = \sqrt{2}$$

$$\sigma_{\text{all}} = \frac{30\,734(0.928)}{2(1)(1)} = 14\,261 \text{ psi}$$

$$Q_v = 5, \quad B = 0.25(12 - 5)^{2/3} = 0.9148$$

$$A = 50 + 56(1 - 0.9148) = 54.77$$

$$K_v = \left(\frac{54.77 + \sqrt{830.7}}{54.77} \right)^{0.9148} = 1.472$$

$$K_s = 1.192 \left(\frac{2\sqrt{0.303}}{6} \right)^{0.0535} = 1.089 \Rightarrow \text{use } 1$$

$$K_m = C_{mf} = 1 + C_{mc}(C_{pf}C_{pm} + C_{ma}C_e)$$

$$C_{mc} = 1$$

$$C_{pf} = \frac{F}{10d} - 0.0375 + 0.0125F$$

$$= \frac{2}{10(2.833)} - 0.0375 + 0.0125(2)$$

$$= 0.0581$$

$$C_{pm} = 1$$

$$C_{ma} = 0.127 + 0.0158(2) - 0.093(10^{-4})(2^2) = 0.1586$$

$$C_e = 1$$

$$K_m = 1 + 1[0.0581(1) + 0.1586(1)] = 1.2167$$

$$K_\beta = 1$$

Eq. (14-15):

$$W^t = \frac{F J_P \sigma_{\text{all}}}{K_o K_v K_s P_d K_m K_B}$$

$$= \frac{2(0.292)(14\,261)}{1(1.472)(1)(6)(1.2167)(1)} = 775 \text{ lbf}$$

$$H = \frac{W^t V}{33\,000} = \frac{775(830.7)}{33\,000} = 19.5 \text{ hp}$$

Pinion wear

Fig. 14-15:

$$Z_N = 2.466N^{-0.056} = 2.466(10^8)^{-0.056} = 0.879$$

$$M_G = 51/17 = 3$$

$$I = \frac{\sin 20^\circ \cos 20^\circ}{2} \left(\frac{3}{3+1} \right) = 1.205, \quad C_H = 1$$

Fig. 14-5: $0.99(S_c)_{10^7} = 322H_B + 29\,100$
 $= 322(232) + 29\,100 = 103\,804 \text{ psi}$
 $\sigma_{c,\text{all}} = \frac{103\,804(0.879)}{\sqrt{2}(1)(1)} = 64\,519 \text{ psi}$

Eq. (14-16): $W^t = \left(\frac{\sigma_{c,\text{all}}}{C_p}\right)^2 \frac{F d_P I}{K_o K_v K_s K_m C_f}$
 $= \left(\frac{64\,519}{2300}\right)^2 \left[\frac{2(2.833)(0.1205)}{1(1.472)(1)(1.2167)(1)} \right]$
 $= 300 \text{ lbf}$
 $H = \frac{W^t V}{33\,000} = \frac{300(830.7)}{33\,000} = 7.55 \text{ hp}$

The pinion controls therefore $H_{\text{rated}} = 7.55 \text{ hp}$ *Ans.*

14-23

$$l = 2.25/P_d, \quad x = \frac{3Y}{2P_d}$$

$$t = \sqrt{4lx} = \sqrt{4 \left(\frac{2.25}{P_d}\right) \left(\frac{3Y}{2P_d}\right)} = \frac{3.674}{P_d} \sqrt{Y}$$

$$d_e = 0.808\sqrt{Ft} = 0.808\sqrt{F \left(\frac{3.674}{P_d}\right) \sqrt{Y}} = 1.5487\sqrt{\frac{F\sqrt{Y}}{P_d}}$$

$$k_b = \left(\frac{1.5487\sqrt{F\sqrt{Y}/P_d}}{0.30}\right)^{-0.107} = 0.8389 \left(\frac{F\sqrt{Y}}{P_d}\right)^{-0.0535}$$

$$K_s = \frac{1}{k_b} = 1.192 \left(\frac{F\sqrt{Y}}{P_d}\right)^{0.0535} \quad \textit{Ans.}$$

14-24 $Y_P = 0.331$, $Y_G = 0.422$, $J_P = 0.345$, $J_G = 0.410$, $K_o = 1.25$. The service conditions are adequately described by K_o . Set $S_F = S_H = 1$.

$$d_P = 22/4 = 5.500 \text{ in}$$

$$d_G = 60/4 = 15.000 \text{ in}$$

$$V = \frac{\pi(5.5)(1145)}{12} = 1649 \text{ ft/min}$$

Pinion bending

$$0.99(S_t)_{10^7} = 77.3H_B + 12\,800 = 77.3(250) + 12\,800 = 32\,125 \text{ psi}$$

$$Y_N = 1.6831[3(10^9)]^{-0.0323} = 0.832$$

$$\text{Eq. (14-17):} \quad (\sigma_{\text{all}})_P = \frac{32\,125(0.832)}{1(1)(1)} = 26\,728 \text{ psi}$$

$$B = 0.25(12 - 6)^{2/3} = 0.8255$$

$$A = 50 + 56(1 - 0.8255) = 59.77$$

$$K_v = \left(\frac{59.77 + \sqrt{1649}}{59.77} \right)^{0.8255} = 1.534$$

$$K_s = 1, \quad C_m = 1$$

$$\begin{aligned} C_{mc} &= \frac{F}{10d} - 0.0375 + 0.0125F \\ &= \frac{3.25}{10(5.5)} - 0.0375 + 0.0125(3.25) = 0.0622 \end{aligned}$$

$$C_{ma} = 0.127 + 0.0158(3.25) - 0.093(10^{-4})(3.25^2) = 0.178$$

$$C_e = 1$$

$$K_m = C_{mf} = 1 + (1)[0.0622(1) + 0.178(1)] = 1.240$$

$$K_B = 1, \quad K_T = 1$$

$$\text{Eq. (14-15):} \quad W_1^t = \frac{26\,728(3.25)(0.345)}{1.25(1.534)(1)(4)(1.240)} = 3151 \text{ lbf}$$

$$H_1 = \frac{3151(1649)}{33\,000} = 157.5 \text{ hp}$$

Gear bending By similar reasoning, $W_2^t = 3861 \text{ lbf}$ and $H_2 = 192.9 \text{ hp}$

Pinion wear

$$m_G = 60/22 = 2.727$$

$$I = \frac{\cos 20^\circ \sin 20^\circ}{2} \left(\frac{2.727}{1 + 2.727} \right) = 0.1176$$

$$0.99(S_c)_{10^7} = 322(250) + 29\,100 = 109\,600 \text{ psi}$$

$$(Z_N)_P = 2.466[3(10^9)]^{-0.056} = 0.727$$

$$(Z_N)_G = 2.466[3(10^9)/2.727]^{-0.056} = 0.769$$

$$(\sigma_{c,\text{all}})_P = \frac{109\,600(0.727)}{1(1)(1)} = 79\,679 \text{ psi}$$

$$\begin{aligned} W_3^t &= \left(\frac{\sigma_{c,\text{all}}}{C_p} \right)^2 \frac{F d_p I}{K_o K_v K_s K_m C_f} \\ &= \left(\frac{79\,679}{2300} \right)^2 \left[\frac{3.25(5.5)(0.1176)}{1.25(1.534)(1)(1.24)(1)} \right] = 1061 \text{ lbf} \end{aligned}$$

$$H_3 = \frac{1061(1649)}{33\,000} = 53.0 \text{ hp}$$

Gear wear

Similarly, $W_4^t = 1182 \text{ lbf}$, $H_4 = 59.0 \text{ hp}$

Rating

$$H_{\text{rated}} = \min(H_1, H_2, H_3, H_4) \\ = \min(157.5, 192.9, 53, 59) = 53 \text{ hp} \quad \text{Ans.}$$

Note differing capacities. Can these be equalized?

14-25 From Prob. 14-24:

$$W_1^t = 3151 \text{ lbf}, \quad W_2^t = 3861 \text{ lbf},$$

$$W_3^t = 1061 \text{ lbf}, \quad W_4^t = 1182 \text{ lbf}$$

$$W^t = \frac{33\,000 K_o H}{V} = \frac{33\,000(1.25)(40)}{1649} = 1000 \text{ lbf}$$

Pinion bending: The factor of safety, based on load and stress, is

$$(S_F)_P = \frac{W_1^t}{1000} = \frac{3151}{1000} = 3.15$$

Gear bending based on load and stress

$$(S_F)_G = \frac{W_2^t}{1000} = \frac{3861}{1000} = 3.86$$

Pinion wear

based on load: $n_3 = \frac{W_3^t}{1000} = \frac{1061}{1000} = 1.06$

based on stress: $(S_H)_P = \sqrt{1.06} = 1.03$

Gear wear

based on load: $n_4 = \frac{W_4^t}{1000} = \frac{1182}{1000} = 1.18$

based on stress: $(S_H)_G = \sqrt{1.18} = 1.09$

Factors of safety are used to assess the relative threat of loss of function 3.15, 3.86, 1.06, 1.18 where the threat is from pinion wear. By comparison, the AGMA safety factors

$$(S_F)_P, (S_F)_G, (S_H)_P, (S_H)_G$$

are

$$3.15, 3.86, 1.03, 1.09 \quad \text{or} \quad 3.15, 3.86, 1.06^{1/2}, 1.18^{1/2}$$

and the threat is again from pinion wear. Depending on the magnitude of the numbers, using S_F and S_H as defined by AGMA, does not necessarily lead to the same conclusion concerning threat. Therefore be cautious.

14-26 Solution summary from Prob. 14-24: $n = 1145$ rev/min, $K_o = 1.25$, Grade 1 materials, $N_P = 22T$, $N_G = 60T$, $m_G = 2.727$, $Y_P = 0.331$, $Y_G = 0.422$, $J_P = 0.345$, $J_G = 0.410$, $P_d = 4T/\text{in}$, $F = 3.25$ in, $Q_v = 6$, $(N_c)_P = 3(10^9)$, $R = 0.99$

Pinion H_B : 250 core, 390 case

Gear H_B : 250 core, 390 case

$K_m = 1.240$, $K_T = 1$, $K_B = 1$, $d_P = 5.500$ in, $d_G = 15.000$ in,
 $V = 1649$ ft/min, $K_v = 1.534$, $(K_s)_P = (K_s)_G = 1$, $(Y_N)_P = 0.832$,
 $(Y_N)_G = 0.859$, $K_R = 1$

Bending

$$(\sigma_{\text{all}})_P = 26\,728 \text{ psi} \quad (S_t)_P = 32\,125 \text{ psi}$$

$$(\sigma_{\text{all}})_G = 27\,546 \text{ psi} \quad (S_t)_G = 32\,125 \text{ psi}$$

$$W_1^t = 3151 \text{ lbf}, \quad H_1 = 157.5 \text{ hp}$$

$$W_2^t = 3861 \text{ lbf}, \quad H_2 = 192.9 \text{ hp}$$

Wear

$$\phi = 20^\circ, \quad I = 0.1176, \quad (Z_N)_P = 0.727,$$

$$(Z_N)_G = 0.769, \quad C_P = 2300\sqrt{\text{psi}}$$

$$(S_c)_P = S_c = 322(390) + 29\,100 = 154\,680 \text{ psi}$$

$$(\sigma_{c,\text{all}})_P = \frac{154\,680(0.727)}{1(1)(1)} = 112\,450 \text{ psi}$$

$$(\sigma_{c,\text{all}})_G = \frac{154\,680(0.769)}{1(1)(1)} = 118\,950 \text{ psi}$$

$$W_3^t = \left(\frac{112\,450}{79\,679} \right)^2 (1061) = 2113 \text{ lbf}, \quad H_3 = \frac{2113(1649)}{33\,000} = 105.6 \text{ hp}$$

$$W_4^t = \left(\frac{118\,950}{109\,600(0.769)} \right)^2 (1182) = 2354 \text{ lbf}, \quad H_4 = \frac{2354(1649)}{33\,000} = 117.6 \text{ hp}$$

Rated power

$$H_{\text{rated}} = \min(157.5, 192.9, 105.6, 117.6) = 105.6 \text{ hp} \quad \text{Ans.}$$

Prob. 14-24

$$H_{\text{rated}} = \min(157.5, 192.9, 53.0, 59.0) = 53 \text{ hp}$$

The rated power approximately doubled.

14-27 The gear and the pinion are 9310 grade 1, carburized and case-hardened to obtain Brinell 285 core and Brinell 580–600 case.

Table 14-3:

$$0.99(S_t)_{10^7} = 55\,000 \text{ psi}$$

Modification of S_t by $(Y_N)_P = 0.832$ produces

$$(\sigma_{\text{all}})_P = 45\,657 \text{ psi,}$$

Similarly for $(Y_N)_G = 0.859$

$$(\sigma_{\text{all}})_G = 47\,161 \text{ psi, and}$$

$$W_1^t = 4569 \text{ lbf, } H_1 = 228 \text{ hp}$$

$$W_2^t = 5668 \text{ lbf, } H_2 = 283 \text{ hp}$$

From Table 14-8, $C_p = 2300\sqrt{\text{psi}}$. Also, from Table 14-6:

$${}_{0.99}(S_c)_{10^7} = 180\,000 \text{ psi}$$

Modification of S_c by (Y_N) produces

$$(\sigma_{c,\text{all}})_P = 130\,525 \text{ psi}$$

$$(\sigma_{c,\text{all}})_G = 138\,069 \text{ psi}$$

and

$$W_3^t = 2489 \text{ lbf, } H_3 = 124.3 \text{ hp}$$

$$W_4^t = 2767 \text{ lbf, } H_4 = 138.2 \text{ hp}$$

Rating

$$H_{\text{rated}} = \min(228, 283, 124, 138) = 124 \text{ hp } \textit{Ans.}$$

14-28 Grade 2 9310 carburized and case-hardened to 285 core and 580 case in Prob. 14-27.

Summary:

Table 14-3:

$${}_{0.99}(S_t)_{10^7} = 65\,000 \text{ psi}$$

$$(\sigma_{\text{all}})_P = 53\,959 \text{ psi}$$

$$(\sigma_{\text{all}})_G = 55\,736 \text{ psi}$$

and it follows that

$$W_1^t = 5399.5 \text{ lbf, } H_1 = 270 \text{ hp}$$

$$W_2^t = 6699 \text{ lbf, } H_2 = 335 \text{ hp}$$

From Table 14-8, $C_p = 2300\sqrt{\text{psi}}$. Also, from Table 14-6:

$$S_c = 225\,000 \text{ psi}$$

$$(\sigma_{c,\text{all}})_P = 181\,285 \text{ psi}$$

$$(\sigma_{c,\text{all}})_G = 191\,762 \text{ psi}$$

Consequently,

$$W_3^t = 4801 \text{ lbf, } H_3 = 240 \text{ hp}$$

$$W_4^t = 5337 \text{ lbf, } H_4 = 267 \text{ hp}$$

Rating

$$H_{\text{rated}} = \min(270, 335, 240, 267) = 240 \text{ hp. } \textit{Ans.}$$

14-29 $n = 1145 \text{ rev/min}$, $K_o = 1.25$, $N_P = 22T$, $N_G = 60T$, $m_G = 2.727$, $d_P = 2.75 \text{ in}$, $d_G = 7.5 \text{ in}$, $Y_P = 0.331$, $Y_G = 0.422$, $J_P = 0.335$, $J_G = 0.405$, $P = 8T/\text{in}$, $F = 1.625 \text{ in}$, $H_B = 250$, case and core, both gears. $C_m = 1$, $F/d_P = 0.0591$, $C_f = 0.0419$, $C_{pm} = 1$, $C_{ma} = 0.152$, $C_e = 1$, $K_m = 1.1942$, $K_T = 1$, $K_\beta = 1$, $K_s = 1$, $V = 824 \text{ ft/min}$, $(Y_N)_P = 0.8318$, $(Y_N)_G = 0.859$, $K_R = 1$, $I = 0.11758$

$$0.99(S_t)_{10^7} = 32\,125 \text{ psi}$$

$$(\sigma_{\text{all}})_P = 26\,668 \text{ psi}$$

$$(\sigma_{\text{all}})_G = 27\,546 \text{ psi}$$

and it follows that

$$W_1^t = 879.3 \text{ lbf}, \quad H_1 = 21.97 \text{ hp}$$

$$W_2^t = 1098 \text{ lbf}, \quad H_2 = 27.4 \text{ hp}$$

For wear

$$W_3^t = 304 \text{ lbf}, \quad H_3 = 7.59 \text{ hp}$$

$$W_4^t = 340 \text{ lbf}, \quad H_4 = 8.50 \text{ hp}$$

Rating

$$H_{\text{rated}} = \min(21.97, 27.4, 7.59, 8.50) = 7.59 \text{ hp}$$

In Prob. 14-24, $H_{\text{rated}} = 53 \text{ hp}$

Thus

$$\frac{7.59}{53.0} = 0.1432 = \frac{1}{6.98}, \quad \text{not } \frac{1}{8} \quad \text{Ans.}$$

The transmitted load rating is

$$W_{\text{rated}}^t = \min(879.3, 1098, 304, 340) = 304 \text{ lbf}$$

In Prob. 14-24

$$W_{\text{rated}}^t = 1061 \text{ lbf}$$

Thus

$$\frac{304}{1061} = 0.2865 = \frac{1}{3.49}, \quad \text{not } \frac{1}{4}, \quad \text{Ans.}$$

14-30 $S_P = S_H = 1$, $P_d = 4$, $J_P = 0.345$, $J_G = 0.410$, $K_o = 1.25$

Bending

Table 14-4: $0.99(S_t)_{10^7} = 13\,000 \text{ psi}$

$$(\sigma_{\text{all}})_P = (\sigma_{\text{all}})_G = \frac{13\,000(1)}{1(1)(1)} = 13\,000 \text{ psi}$$

$$W_1^t = \frac{\sigma_{\text{all}} F J_P}{K_o K_v K_s P_d K_m K_B} = \frac{13\,000(3.25)(0.345)}{1.25(1.534)(1)(4)(1.24)(1)} = 1533 \text{ lbf}$$

$$H_1 = \frac{1533(1649)}{33\,000} = 76.6 \text{ hp}$$

$$W_2^t = W_1^t J_G / J_P = 1533(0.410) / 0.345 = 1822 \text{ lbf}$$

$$H_2 = H_1 J_G / J_P = 76.6(0.410) / 0.345 = 91.0 \text{ hp}$$

Wear

Table 14-8: $C_p = 1960\sqrt{\text{psi}}$

Table 14-7: $0.99(S_c)_{10^7} = 75\,000 \text{ psi} = (\sigma_{c,\text{all}})_P = (\sigma_{c,\text{all}})_G$

$$W_3^t = \left(\frac{(\sigma_{c,\text{all}})_P}{C_p} \right)^2 \frac{F d p I}{K_o K_v K_s K_m C_f}$$

$$W_3^t = \left(\frac{75\,000}{1960} \right)^2 \frac{3.25(5.5)(0.1176)}{1.25(1.534)(1)(1.24)(1)} = 1295 \text{ lbf}$$

$$W_4^t = W_3^t = 1295 \text{ lbf}$$

$$H_4 = H_3 = \frac{1295(1649)}{33\,000} = 64.7 \text{ hp}$$

Rating

$$H_{\text{rated}} = \min(76.7, 94.4, 64.7, 64.7) = 64.7 \text{ hp} \quad \text{Ans.}$$

Notice that the balance between bending and wear power is improved due to CI's more favorable S_c/S_t ratio. Also note that the life is 10^7 pinion revolutions which is $(1/300)$ of $3(10^9)$. Longer life goals require power derating.

14-31 From Table A-24a, $E_{av} = 11.8(10^6)$

For $\phi = 14.5^\circ$ and $H_B = 156$

$$S_C = \sqrt{\frac{1.4(81)}{2 \sin 14.5^\circ/[11.8(10^6)]}} = 51\,693 \text{ psi}$$

For $\phi = 20^\circ$

$$S_C = \sqrt{\frac{1.4(112)}{2 \sin 20^\circ/[11.8(10^6)]}} = 52\,008 \text{ psi}$$

$$S_C = 0.32(156) = 49.9 \text{ kpsi}$$

14-32 Programs will vary.

14-33

$$(Y_N)_P = 0.977, \quad (Y_N)_G = 0.996$$

$$(S_t)_P = (S_t)_G = 82.3(250) + 12\,150 = 32\,725 \text{ psi}$$

$$(\sigma_{\text{all}})_P = \frac{32\,725(0.977)}{1(0.85)} = 37\,615 \text{ psi}$$

$$W_1^t = \frac{37\,615(1.5)(0.423)}{1(1.404)(1.043)(8.66)(1.208)(1)} = 1558 \text{ lbf}$$

$$H_1 = \frac{1558(925)}{33\,000} = 43.7 \text{ hp}$$

$$(\sigma_{\text{all}})_G = \frac{32\,725(0.996)}{1(0.85)} = 38\,346 \text{ psi}$$

$$W_2^t = \frac{38\,346(1.5)(0.5346)}{1(1.404)(1.043)(8.66)(1.208)(1)} = 2007 \text{ lbf}$$

$$H_2 = \frac{2007(925)}{33\,000} = 56.3 \text{ hp}$$

$$(Z_N)_P = 0.948, \quad (Z_N)_G = 0.973$$

Table 14-6: $0.99(S_c)_{10^7} = 150\,000 \text{ psi}$

$$(\sigma_{c,\text{allow}})_P = 150\,000 \left[\frac{0.948(1)}{1(0.85)} \right] = 167\,294 \text{ psi}$$

$$W_3^t = \left(\frac{167\,294}{2300} \right)^2 \left[\frac{1.963(1.5)(0.195)}{1(1.404)(1.043)} \right] = 2074 \text{ lbf}$$

$$H_3 = \frac{2074(925)}{33\,000} = 58.1 \text{ hp}$$

$$(\sigma_{c,\text{allow}})_G = \frac{0.973}{0.948}(167\,294) = 171\,706 \text{ psi}$$

$$W_4^t = \left(\frac{171\,706}{2300} \right)^2 \left[\frac{1.963(1.5)(0.195)}{1(1.404)(1.052)} \right] = 2167 \text{ lbf}$$

$$H_4 = \frac{2167(925)}{33\,000} = 60.7 \text{ hp}$$

$$H_{\text{rated}} = \min(43.7, 56.3, 58.1, 60.7) = 43.7 \text{ hp} \quad \text{Ans.}$$

Pinion bending controlling

14-34

$$(Y_N)_P = 1.6831(10^8)^{-0.0323} = 0.928$$

$$(Y_N)_G = 1.6831(10^8/3.059)^{-0.0323} = 0.962$$

Table 14-3: $S_t = 55\,000 \text{ psi}$

$$(\sigma_{\text{all}})_P = \frac{55\,000(0.928)}{1(0.85)} = 60\,047 \text{ psi}$$

$$W_1^t = \frac{60\,047(1.5)(0.423)}{1(1.404)(1.043)(8.66)(1.208)(1)} = 2487 \text{ lbf}$$

$$H_1 = \frac{2487(925)}{33\,000} = 69.7 \text{ hp}$$

$$(\sigma_{\text{all}})_G = \frac{0.962}{0.928}(60\,047) = 62\,247 \text{ psi}$$

$$W_2^t = \frac{62\,247}{60\,047} \left(\frac{0.5346}{0.423} \right) (2487) = 3258 \text{ lbf}$$

$$H_2 = \frac{3258}{2487}(69.7) = 91.3 \text{ hp}$$

Table 14-6:

$$S_c = 180\,000 \text{ psi}$$

$$(Z_N)_P = 2.466(10^8)^{-0.056} = 0.8790$$

$$(Z_N)_G = 2.466(10^8/3.059)^{-0.056} = 0.9358$$

$$(\sigma_{c,\text{all}})_P = \frac{180\,000(0.8790)}{1(0.85)} = 186\,141 \text{ psi}$$

$$W_3^t = \left(\frac{186\,141}{2300} \right)^2 \left[\frac{1.963(1.5)(0.195)}{1(1.404)(1.043)} \right] = 2568 \text{ lbf}$$

$$H_3 = \frac{2568(925)}{33\,000} = 72.0 \text{ hp}$$

$$(\sigma_{c,\text{all}})_G = \frac{0.9358}{0.8790}(186\,141) = 198\,169 \text{ psi}$$

$$W_4^t = \left(\frac{198\,169}{186\,141} \right)^2 \left(\frac{1.043}{1.052} \right) (2568) = 2886 \text{ lbf}$$

$$H_4 = \frac{2886(925)}{33\,000} = 80.9 \text{ hp}$$

$$H_{\text{rated}} = \min(69.7, 91.3, 72, 80.9) = 69.7 \text{ hp} \quad \text{Ans.}$$

Pinion bending controlling

14-35 $(Y_N)_P = 0.928$, $(Y_N)_G = 0.962$ (See Prob. 14-34)

Table 14-3:

$$S_t = 65\,000 \text{ psi}$$

$$(\sigma_{\text{all}})_P = \frac{65\,000(0.928)}{1(0.85)} = 70\,965 \text{ psi}$$

$$W_1^t = \frac{70\,965(1.5)(0.423)}{1(1.404)(1.043)(8.66)(1.208)} = 2939 \text{ lbf}$$

$$H_1 = \frac{2939(925)}{33\,000} = 82.4 \text{ hp}$$

$$(\sigma_{\text{all}})_G = \frac{65\,000(0.962)}{1(0.85)} = 73\,565 \text{ psi}$$

$$W_2^t = \frac{73\,565}{70\,965} \left(\frac{0.5346}{0.423} \right) (2939) = 3850 \text{ lbf}$$

$$H_2 = \frac{3850}{2939}(82.4) = 108 \text{ hp}$$

Table 14-6: $S_c = 225\,000$ psi

$$(Z_N)_P = 0.8790, \quad (Z_N)_G = 0.9358$$

$$(\sigma_{c,all})_P = \frac{225\,000(0.879)}{1(0.85)} = 232\,676 \text{ psi}$$

$$W_3^t = \left(\frac{232\,676}{2300} \right)^2 \left[\frac{1.963(1.5)(0.195)}{1(1.404)(1.043)} \right] = 4013 \text{ lbf}$$

$$H_3 = \frac{4013(925)}{33\,000} = 112.5 \text{ hp}$$

$$(\sigma_{c,all})_G = \frac{0.9358}{0.8790}(232\,676) = 247\,711 \text{ psi}$$

$$W_4^t = \left(\frac{247\,711}{232\,676} \right)^2 \left(\frac{1.043}{1.052} \right) (4013) = 4509 \text{ lbf}$$

$$H_4 = \frac{4509(925)}{33\,000} = 126 \text{ hp}$$

$$H_{\text{rated}} = \min(82.4, 108, 112.5, 126) = 82.4 \text{ hp} \quad \text{Ans.}$$

The bending of the pinion is the controlling factor.

Chapter 15

15-1 Given: Uncrowned, through-hardened 300 Brinell core and case, Grade 1, $N_C = 10^9$ rev of pinion at $R = 0.999$, $N_P = 20$ teeth, $N_G = 60$ teeth, $Q_v = 6$, $P_d = 6$ teeth/in, shaft angle 90° , $n_p = 900$ rev/min, $J_P = 0.249$ and $J_G = 0.216$ (Fig. 15-7), $F = 1.25$ in, $S_F = S_H = 1$, $K_o = 1$.

Mesh $d_P = 20/6 = 3.333$ in

$d_G = 60/6 = 10.000$ in

Eq. (15-7): $v_t = \pi(3.333)(900/12) = 785.3$ ft/min

Eq. (15-6): $B = 0.25(12 - 6)^{2/3} = 0.8255$

$A = 50 + 56(1 - 0.8255) = 59.77$

Eq. (15-5): $K_v = \left(\frac{59.77 + \sqrt{785.3}}{59.77} \right)^{0.8255} = 1.374$

Eq. (15-8): $v_{t,max} = [59.77 + (6 - 3)]^2 = 3940$ ft/min

Since $785.3 < 3904$, $K_v = 1.374$ is valid. The size factor for bending is:

Eq. (15-10): $K_s = 0.4867 + 0.2132/6 = 0.5222$

For one gear straddle-mounted, the load-distribution factor is:

Eq. (15-11): $K_m = 1.10 + 0.0036(1.25)^2 = 1.106$

Eq. (15-15): $(K_L)_P = 1.6831(10^9)^{-0.0323} = 0.862$

$(K_L)_G = 1.6831(10^9/3)^{-0.0323} = 0.893$

Eq. (15-14): $(C_L)_P = 3.4822(10^9)^{-0.0602} = 1$

$(C_L)_G = 3.4822(10^9/3)^{-0.0602} = 1.069$

Eq. (15-19): $K_R = 0.50 - 0.25 \log(1 - 0.999) = 1.25$ (or Table 15-3)

$C_R = \sqrt{K_R} = \sqrt{1.25} = 1.118$

Bending

Fig. 15-13: $0.99S_t = s_{at} = 44(300) + 2100 = 15\,300$ psi

Eq. (15-4): $(\sigma_{all})_P = s_{wt} = \frac{s_{at}K_L}{S_F K_T K_R} = \frac{15\,300(0.862)}{1(1)(1.25)} = 10\,551$ psi

Eq. (15-3): $W_P^t = \frac{(\sigma_{all})_P F K_x J_P}{P_d K_o K_v K_s K_m}$
 $= \frac{10\,551(1.25)(1)(0.249)}{6(1)(1.374)(0.5222)(1.106)} = 690$ lbf

$H_1 = \frac{690(785.3)}{33\,000} = 16.4$ hp

Eq. (15-4): $(\sigma_{all})_G = \frac{15\,300(0.893)}{1(1)(1.25)} = 10\,930$ psi

$$W_G^t = \frac{10930(1.25)(1)(0.216)}{6(1)(1.374)(0.5222)(1.106)} = 620 \text{ lbf}$$

$$H_2 = \frac{620(785.3)}{33\,000} = 14.8 \text{ hp} \quad \text{Ans.}$$

The gear controls the bending rating.

15-2 Refer to Prob. 15-1 for the gearset specifications.

Wear

Fig. 15-12: $s_{ac} = 341(300) + 23\,620 = 125\,920 \text{ psi}$

For the pinion, $C_H = 1$. From Prob. 15-1, $C_R = 1.118$. Thus, from Eq. (15-2):

$$(\sigma_{c,\text{all}})_P = \frac{s_{ac}(C_L)_P C_H}{S_H K_T C_R}$$

$$(\sigma_{c,\text{all}})_P = \frac{125\,920(1)(1)}{1(1)(1.118)} = 112\,630 \text{ psi}$$

For the gear, from Eq. (15-16),

$$B_1 = 0.008\,98(300/300) - 0.008\,29 = 0.000\,69$$

$$C_H = 1 + 0.000\,69(3 - 1) = 1.001\,38$$

And Prob. 15-1, $(C_L)_G = 1.0685$. Equation (15-2) thus gives

$$(\sigma_{c,\text{all}})_G = \frac{s_{ac}(C_L)_G C_H}{S_H K_T C_R}$$

$$(\sigma_{c,\text{all}})_G = \frac{125\,920(1.0685)(1.001\,38)}{1(1)(1.118)} = 120\,511 \text{ psi}$$

For steel: $C_p = 2290\sqrt{\text{psi}}$

Eq. (15-9): $C_s = 0.125(1.25) + 0.4375 = 0.593\,75$

Fig. 15-6: $I = 0.083$

Eq. (15-12): $C_{xc} = 2$

Eq. (15-1):
$$W_P^t = \left(\frac{(\sigma_{c,\text{all}})_P}{C_p} \right)^2 \frac{F d_p I}{K_o K_v K_m C_s C_{xc}}$$

$$= \left(\frac{112\,630}{2290} \right)^2 \left[\frac{1.25(3.333)(0.083)}{1(1.374)(1.106)(0.5937)(2)} \right]$$

$$= 464 \text{ lbf}$$

$$H_3 = \frac{464(785.3)}{33\,000} = 11.0 \text{ hp}$$

$$W_G^t = \left(\frac{120\,511}{2290} \right)^2 \left[\frac{1.25(3.333)(0.083)}{1(1.374)(1.106)(0.59375)(2)} \right]$$

$$= 531 \text{ lbf}$$

$$H_4 = \frac{531(785.3)}{33\,000} = 12.6 \text{ hp}$$

The pinion controls wear: $H = 11.0 \text{ hp}$ *Ans.*

The power rating of the mesh, considering the power ratings found in Prob. 15-1, is

$$H = \min(16.4, 14.8, 11.0, 12.6) = 11.0 \text{ hp} \quad \textit{Ans.}$$

15-3 AGMA 2003-B97 does not fully address cast iron gears, however, approximate comparisons can be useful. This problem is similar to Prob. 15-1, but not identical. We will organize the method. A follow-up could consist of completing Probs. 15-1 and 15-2 with identical pinions, and cast iron gears.

Given: Uncrowned, straight teeth, $P_d = 6 \text{ teeth/in}$, $N_P = 30 \text{ teeth}$, $N_G = 60 \text{ teeth}$, ASTM 30 cast iron, material Grade 1, shaft angle 90° , $F = 1.25$, $n_P = 900 \text{ rev/min}$, $\phi_n = 20^\circ$, one gear straddle-mounted, $K_o = 1$, $J_P = 0.268$, $J_G = 0.228$, $S_F = 2$, $S_H = \sqrt{2}$.

$$\begin{aligned} \textit{Mesh} \quad d_P &= 30/6 = 5.000 \text{ in} \\ d_G &= 60/6 = 10.000 \text{ in} \\ v_t &= \pi(5)(900/12) = 1178 \text{ ft/min} \end{aligned}$$

Set $N_L = 10^7$ cycles for the pinion. For $R = 0.99$,

$$\text{Table 15-7:} \quad s_{at} = 4500 \text{ psi}$$

$$\text{Table 15-5:} \quad s_{ac} = 50\,000 \text{ psi}$$

$$\text{Eq. (15-4):} \quad s_{wt} = \frac{s_{at} K_L}{S_F K_T K_R} = \frac{4500(1)}{2(1)(1)} = 2250 \text{ psi}$$

The velocity factor K_v represents stress augmentation due to mislocation of tooth profiles along the pitch surface and the resulting “falling” of teeth into engagement. Equation (5-67) shows that the induced bending moment in a cantilever (tooth) varies directly with \sqrt{E} of the tooth material. If only the material varies (cast iron vs. steel) in the same geometry, I is the same. From the Lewis equation of Section 14-1,

$$\sigma = \frac{M}{I/c} = \frac{K_v W^t P}{FY}$$

We expect the ratio $\sigma_{CI}/\sigma_{steel}$ to be

$$\frac{\sigma_{CI}}{\sigma_{steel}} = \frac{(K_v)_{CI}}{(K_v)_{steel}} = \sqrt{\frac{E_{CI}}{E_{steel}}}$$

In the case of ASTM class 30, from Table A-24(a)

$$(E_{CI})_{av} = (13 + 16.2)/2 = 14.7 \text{ kpsi}$$

Then

$$(K_v)_{CI} = \sqrt{\frac{14.7}{30}} (K_v)_{steel} = 0.7 (K_v)_{steel}$$

Our modeling is rough, but it convinces us that $(K_v)_{CI} < (K_v)_{steel}$, but we are not sure of the value of $(K_v)_{CI}$. We will use K_v for steel as a basis for a conservative rating.

$$\begin{aligned} \text{Eq. (15-6):} \quad B &= 0.25(12 - 6)^{2/3} = 0.8255 \\ A &= 50 + 56(1 - 0.8255) = 59.77 \end{aligned}$$

$$\text{Eq. (15-5):} \quad K_v = \left(\frac{59.77 + \sqrt{1178}}{59.77} \right)^{0.8255} = 1.454$$

Pinion bending $(\sigma_{all})_P = s_{wt} = 2250 \text{ psi}$

From Prob. 15-1, $K_x = 1, K_m = 1.106, K_s = 0.5222$

$$\begin{aligned} \text{Eq. (15-3):} \quad W_P^t &= \frac{(\sigma_{all})_P F K_x J_P}{P_d K_o K_v K_s K_m} \\ &= \frac{2250(1.25)(1)(0.268)}{6(1)(1.454)(0.5222)(1.106)} = 149.6 \text{ lbf} \\ H_1 &= \frac{149.6(1178)}{33\,000} = 5.34 \text{ hp} \end{aligned}$$

Gear bending

$$\begin{aligned} W_G^t &= W_P^t \frac{J_G}{J_P} = 149.6 \left(\frac{0.228}{0.268} \right) = 127.3 \text{ lbf} \\ H_2 &= \frac{127.3(1178)}{33\,000} = 4.54 \text{ hp} \end{aligned}$$

The gear controls in bending fatigue.

$$H = 4.54 \text{ hp} \quad \text{Ans.}$$

15-4 Continuing Prob. 15-3,

Table 15-5: $s_{ac} = 50\,000 \text{ psi}$

$$s_{wt} = \sigma_{c,all} = \frac{50\,000}{\sqrt{2}} = 35\,355 \text{ psi}$$

$$\text{Eq. (15-1):} \quad W^t = \left(\frac{\sigma_{c,all}}{C_p} \right)^2 \frac{F d_p I}{K_o K_v K_m C_s C_{xc}}$$

Fig. 15-6: $I = 0.86$

Eq. (15-9) $C_s = 0.125(1.25) + 0.4375 = 0.59375$

Eq. (15-10) $K_s = 0.4867 + 0.2132/6 = 0.5222$

Eq. (15-11) $K_m = 1.10 + 0.0036(1.25)^2 = 1.106$

Eq. (15-12) $C_{xc} = 2$

From Table 14-8: $C_p = 1960\sqrt{\text{psi}}$

$$\text{Thus, } W^t = \left(\frac{35\,355}{1960} \right)^2 \left[\frac{1.25(5.000)(0.086)}{1(1.454)(1.106)(0.59375)(2)} \right] = 91.6 \text{ lbf}$$

$$H_3 = H_4 = \frac{91.6(1178)}{33\,000} = 3.27 \text{ hp } \textit{Ans.}$$

Rating Based on results of Probs. 15-3 and 15-4,

$$H = \min(5.34, 4.54, 3.27, 3.27) = 3.27 \text{ hp } \textit{Ans.}$$

The mesh is weakest in wear fatigue.

15-5 Uncrowned, through-hardened to 180 Brinell (core and case), Grade 1, 10^9 rev of pinion at $R = 0.999$, $N_P = z_1 = 22$ teeth, $N_G = z_2 = 24$ teeth, $Q_v = 5$, $m_{et} = 4$ mm, shaft angle 90° , $n_1 = 1800$ rev/min, $S_F = 1$, $S_H = \sqrt{S_F} = \sqrt{1}$, $J_P = Y_{J1} = 0.23$, $J_G = Y_{J2} = 0.205$, $F = b = 25$ mm, $K_o = K_A = K_T = K_\theta = 1$ and $C_p = 190\sqrt{\text{MPa}}$.

$$\textit{Mesh} \quad d_P = d_{e1} = m z_1 = 4(22) = 88 \text{ mm}$$

$$d_G = m_{et} z_2 = 4(24) = 96 \text{ mm}$$

$$\text{Eq. (15-7):} \quad v_{et} = 5.236(10^{-5})(88)(1800) = 8.29 \text{ m/s}$$

$$\text{Eq. (15-6):} \quad B = 0.25(12 - 5)^{2/3} = 0.9148$$

$$A = 50 + 56(1 - 0.9148) = 54.77$$

$$\text{Eq. (15-5):} \quad K_v = \left(\frac{54.77 + \sqrt{200(8.29)}}{54.77} \right)^{0.9148} = 1.663$$

$$\text{Eq. (15-10):} \quad K_s = Y_x = 0.4867 + 0.008\,339(4) = 0.520$$

$$\text{Eq. (15-11) with} \quad K_{mb} = 1 \quad (\text{both straddle-mounted}),$$

$$K_m = K_{H\beta} = 1 + 5.6(10^{-6})(25^2) = 1.0035$$

From Fig. 15-8,

$$(C_L)_P = (Z_{NT})_P = 3.4822(10^9)^{-0.0602} = 1.00$$

$$(C_L)_G = (Z_{NT})_G = 3.4822[10^9(22/24)]^{-0.0602} = 1.0054$$

$$\text{Eq. (15-12):} \quad C_{xc} = Z_{xc} = 2 \quad (\text{uncrowned})$$

$$\text{Eq. (15-19):} \quad K_R = Y_Z = 0.50 - 0.25 \log(1 - 0.999) = 1.25$$

$$C_R = Z_Z = \sqrt{Y_Z} = \sqrt{1.25} = 1.118$$

$$\text{From Fig. 15-10,} \quad C_H = Z_w = 1$$

$$\text{Eq. (15-9):} \quad Z_x = 0.004\,92(25) + 0.4375 = 0.560$$

Wear of Pinion

$$\text{Fig. 15-12:} \quad \sigma_{H \text{ lim}} = 2.35H_B + 162.89$$

$$= 2.35(180) + 162.89 = 585.9 \text{ MPa}$$

$$\text{Fig. 15-6:} \quad I = Z_I = 0.066$$

$$\begin{aligned} \text{Eq. (15-2):} \quad (\sigma_H)_P &= \frac{(\sigma_{H \text{ lim}})_P (Z_{NT})_P Z_W}{S_H K_\theta Z_Z} \\ &= \frac{585.9(1)(1)}{\sqrt{1}(1)(1.118)} = 524.1 \text{ MPa} \end{aligned}$$

$$\text{Eq. (15-1):} \quad W_P^t = \left(\frac{\sigma_H}{C_p} \right)^2 \frac{b d_{e1} Z_I}{1000 K_A K_v K_{H\beta} Z_x Z_{xc}}$$

The constant 1000 expresses W^t in kN

$$W_P^t = \left(\frac{524.1}{190} \right)^2 \left[\frac{25(88)(0.066)}{1000(1)(1.663)(1.0035)(0.56)(2)} \right] = 0.591 \text{ kN}$$

$$\text{Eq. (13-36): } H_3 = \frac{\pi d n W^t}{60\,000} = \frac{\pi(88)1800(0.591)}{60\,000} = 4.90 \text{ kW}$$

$$\text{Wear of Gear } \sigma_{H \text{ lim}} = 585.9 \text{ MPa}$$

$$(\sigma_H)_G = \frac{585.9(1.0054)}{\sqrt{1}(1)(1.118)} = 526.9 \text{ MPa}$$

$$W_G^t = W_P^t \frac{(\sigma_H)_G}{(\sigma_H)_P} = 0.591 \left(\frac{526.9}{524.1} \right) = 0.594 \text{ kN}$$

$$H_4 = \frac{\pi(88)1800(0.594)}{60\,000} = 4.93 \text{ kW}$$

Thus in wear, the pinion controls the power rating; $H = 4.90 \text{ kW}$ Ans.

We will rate the gear set after solving Prob. 15-6.

15-6 Refer to Prob. 15-5 for terms not defined below.

Bending of Pinion

$$\text{Eq. (15-15): } (K_L)_P = (Y_{NT})_P = 1.6831(10^9)^{-0.0323} = 0.862$$

$$(K_L)_G = (Y_{NT})_G = 1.6831[10^9(22/24)]^{-0.0323} = 0.864$$

$$\begin{aligned} \text{Fig. 15-13: } \sigma_{F \text{ lim}} &= 0.30H_B + 14.48 \\ &= 0.30(180) + 14.48 = 68.5 \text{ MPa} \end{aligned}$$

$$\text{Eq. (15-13): } K_x = Y_\beta = 1$$

$$\text{From Prob. 15-5: } Y_Z = 1.25, \quad v_{et} = 8.29 \text{ m/s}$$

$$K_A = 1, \quad K_v = 1.663, \quad K_\theta = 1, \quad Y_x = 0.52, \quad K_{H\beta} = 1.0035, \quad Y_{J1} = 0.23$$

$$\text{Eq. (5-4): } (\sigma_F)_P = \frac{\sigma_{F \text{ lim}} Y_{NT}}{S_F K_\theta Y_Z} = \frac{68.5(0.862)}{1(1)(1.25)} = 47.2 \text{ MPa}$$

$$\begin{aligned} \text{Eq. (5-3): } W_P^t &= \frac{(\sigma_F)_P b m_{et} Y_\beta Y_{J1}}{1000 K_A K_v Y_x K_{H\beta}} \\ &= \frac{47.2(25)(4)(1)(0.23)}{1000(1)(1.663)(0.52)(1.0035)} = 1.25 \text{ kN} \end{aligned}$$

$$H_1 = \frac{\pi(88)1800(1.25)}{60\,000} = 10.37 \text{ kW}$$

Bending of Gear

$$\sigma_{F \text{ lim}} = 68.5 \text{ MPa}$$

$$(\sigma_F)_G = \frac{68.5(0.864)}{1(1)(1.25)} = 47.3 \text{ MPa}$$

$$W_G^t = \frac{47.3(25)(4)(1)(0.205)}{1000(1)(1.663)(0.52)(1.0035)} = 1.12 \text{ kN}$$

$$H_2 = \frac{\pi(88)1800(1.12)}{60\,000} = 9.29 \text{ kW}$$

Rating of mesh is

$$H_{\text{rating}} = \min(10.37, 9.29, 4.90, 4.93) = 4.90 \text{ kW} \quad \text{Ans.}$$

with pinion wear controlling.

15-7

$$(a) \quad (S_F)_P = \left(\frac{\sigma_{\text{all}}}{\sigma} \right)_P = (S_F)_G = \left(\frac{\sigma_{\text{all}}}{\sigma} \right)_G$$

$$\frac{(s_{at} K_L / K_T K_R)_P}{(W^t P_d K_o K_v K_s K_m / F K_x J)_P} = \frac{(s_{at} K_L / K_T K_R)_G}{(W^t P_d K_o K_v K_s K_m / F K_x J)_G}$$

All terms cancel except for s_{at} , K_L , and J ,

$$(s_{at})_P (K_L)_P J_P = (s_{at})_G (K_L)_G J_G$$

From which

$$(s_{at})_G = \frac{(s_{at})_P (K_L)_P J_P}{(K_L)_G J_G} = (s_{at})_P \frac{J_P}{J_G} m_G^\beta$$

Where $\beta = -0.0178$ or $\beta = -0.0323$ as appropriate. This equation is the same as Eq. (14-44). *Ans.*

(b) In bending

$$W^t = \left(\frac{\sigma_{\text{all}}}{S_F} \frac{F K_x J}{P_d K_o K_v K_s K_m} \right)_{11} = \left(\frac{s_{at}}{S_F} \frac{K_L}{K_T K_R} \frac{F K_x J}{P_d K_o K_v K_s K_m} \right)_{11} \quad (1)$$

In wear

$$\left(\frac{s_{ac} C_L C_U}{S_H K_T C_R} \right)_{22} = C_p \left(\frac{W^t K_o K_v K_m C_s C_{xc}}{F d_p I} \right)_{22}^{1/2}$$

Squaring and solving for W^t gives

$$W^t = \left(\frac{s_{ac}^2 C_L^2 C_H^2}{S_H^2 K_T^2 C_R^2 C_P^2} \right)_{22} \left(\frac{F d_p I}{K_o K_v K_m C_s C_{xc}} \right)_{22} \quad (2)$$

Equating the right-hand sides of Eqs. (1) and (2) and canceling terms, and recognizing that $C_R = \sqrt{K_R}$ and $P_d d_p = N_P$,

we obtain

$$(s_{ac})_{22} = \frac{C_p}{(C_L)_{22}} \sqrt{\frac{S_H^2 (s_{at})_{11} (K_L)_{11} K_x J_{11} K_T C_s C_{xc}}{S_F C_H^2 N_P K_s I}}$$

For equal W^t in bending and wear

$$\frac{S_H^2}{S_F} = \frac{(\sqrt{S_F})^2}{S_F} = 1$$

So we get

$$(s_{ac})_G = \frac{C_p}{(C_L)_G C_H} \sqrt{\frac{(s_{at})_P (K_L)_P J_P K_x K_T C_s C_{xc}}{N_P I K_s}} \quad \text{Ans.}$$

(c)

$$(S_H)_P = (S_H)_G = \left(\frac{\sigma_{c,all}}{\sigma_c} \right)_P = \left(\frac{\sigma_{c,all}}{\sigma_c} \right)_G$$

Substituting in the right-hand equality gives

$$\frac{[s_{ac}C_L/(C_RK_T)]_P}{\left[C_P \sqrt{W^t K_o K_v K_m C_s C_{xc}} / (Fd_P I) \right]_P} = \frac{[s_{ac}C_L C_H / (C_R K_T)]_G}{\left[C_P \sqrt{W^t K_o K_v K_m C_s C_{xc}} / (Fd_P I) \right]_G}$$

Denominators cancel leaving

$$(s_{ac})_P (C_L)_P = (s_{ac})_G (C_L)_G C_H$$

Solving for $(s_{ac})_P$ gives,

$$(s_{ac})_P = (s_{ac})_G \frac{(C_L)_G}{(C_L)_P} C_H \tag{1}$$

From Eq. (15-14), $(C_L)_P = 3.4822 N_L^{-0.0602}$, $(C_L)_G = 3.4822 (N_L/m_G)^{-0.0602}$. Thus,

$$(s_{ac})_P = (s_{ac})_G (1/m_G)^{-0.0602} C_H = (s_{ac})_G m_G^{0.0602} C_H \quad \text{Ans.}$$

This equation is the transpose of Eq. (14-45).

15-8

	Core	Case
Pinion	$(H_B)_{11}$	$(H_B)_{12}$
Gear	$(H_B)_{21}$	$(H_B)_{22}$

Given $(H_B)_{11} = 300$ Brinell

Eq. (15-23): $(s_{at})_P = 44(300) + 2100 = 15\,300$ psi

From Prob. 15-7,

$$(s_{at})_G = (s_{at})_P \frac{J_P}{J_G} m_G^{-0.0323} = 15\,300 \left(\frac{0.249}{0.216} \right) (3^{-0.0323}) = 17\,023$$
 psi

$$(H_B)_{21} = \frac{17\,023 - 2100}{44} = 339$$
 Brinell *Ans.*

$$(s_{ac})_G = \frac{2290}{1.0685(1)} \sqrt{\frac{15\,300(0.862)(0.249)(1)(0.593\,25)(2)}{20(0.086)(0.5222)}} = 141\,160$$
 psi

$$(H_B)_{22} = \frac{141\,160 - 23\,600}{341} = 345$$
 Brinell *Ans.*

$$(s_{ac})_P = (s_{ac})_G m_G^{0.0602} C_H = 141\,160 (3^{0.0602})(1) = 150\,811$$
 psi

$$(H_B)_{12} = \frac{150\,811 - 23\,600}{341} = 373$$
 Brinell *Ans.*

	Core	Case	
Pinion	300	373	<i>Ans.</i>
Gear	339	345	

15-9 *Pinion core*

$$(s_{at})_P = 44(300) + 2100 = 15\,300 \text{ psi}$$

$$(\sigma_{\text{all}})_P = \frac{15\,300(0.862)}{1(1)(1.25)} = 10\,551 \text{ psi}$$

$$W^t = \frac{10\,551(1.25)(0.249)}{6(1)(1.374)(0.5222)(1.106)} = 689.7 \text{ lbf}$$

Gear core

$$(s_{at})_G = 44(352) + 2100 = 17\,588 \text{ psi}$$

$$(\sigma_{\text{all}})_G = \frac{17\,588(0.893)}{1(1)(1.25)} = 12\,565 \text{ psi}$$

$$W^t = \frac{12\,565(1.25)(0.216)}{6(1)(1.374)(0.5222)(1.106)} = 712.5 \text{ lbf}$$

Pinion case

$$(s_{ac})_P = 341(372) + 23\,620 = 150\,472 \text{ psi}$$

$$(\sigma_{c,\text{all}})_P = \frac{150\,472(1)}{1(1)(1.118)} = 134\,590 \text{ psi}$$

$$W^t = \left(\frac{134\,590}{2290} \right)^2 \left[\frac{1.25(3.333)(0.086)}{1(1.374)(1.106)(0.593\,75)(2)} \right] = 685.8 \text{ lbf}$$

Gear case

$$(s_{ac})_G = 341(344) + 23\,620 = 140\,924 \text{ psi}$$

$$(\sigma_{c,\text{all}})_G = \frac{140\,924(1.0685)(1)}{1(1)(1.118)} = 134\,685 \text{ psi}$$

$$W^t = \left(\frac{134\,685}{2290} \right)^2 \left[\frac{1.25(3.333)(0.086)}{1(1.374)(1.106)(0.593\,75)(2)} \right] = 686.8 \text{ lbf}$$

The rating load would be

$$W^t_{\text{rated}} = \min(689.7, 712.5, 685.8, 686.8) = 685.8 \text{ lbf}$$

which is slightly less than intended.

Pinion core

$$(s_{at})_P = 15\,300 \text{ psi} \quad (\text{as before})$$

$$(\sigma_{\text{all}})_P = 10\,551 \quad (\text{as before})$$

$$W^t = 689.7 \quad (\text{as before})$$

Gear core

$$(s_{at})_G = 44(339) + 2100 = 17\,016 \text{ psi}$$

$$(\sigma_{\text{all}})_G = \frac{17\,016(0.893)}{1(1)(1.25)} = 12\,156 \text{ psi}$$

$$W^t = \frac{12\,156(1.25)(0.216)}{6(1)(1.374)(0.5222)(1.106)} = 689.3 \text{ lbf}$$

Pinion case

$$(s_{ac})_P = 341(373) + 23\,620 = 150\,813 \text{ psi}$$

$$(\sigma_{c,\text{all}})_P = \frac{150\,813(1)}{1(1)(1.118)} = 134\,895 \text{ psi}$$

$$W^t = \left(\frac{134\,895}{2290} \right)^2 \left[\frac{1.25(3.333)(0.086)}{1(1.374)(1.106)(0.593\,75)(2)} \right] = 689.0 \text{ lbf}$$

Gear case

$$(s_{ac})_G = 341(345) + 23\,620 = 141\,265 \text{ psi}$$

$$(\sigma_{c,\text{all}})_G = \frac{141\,265(1.0685)(1)}{1(1)(1.118)} = 135\,010 \text{ psi}$$

$$W^t = \left(\frac{135\,010}{2290} \right)^2 \left[\frac{1.25(3.333)(0.086)}{1(1.1374)(1.106)(0.593\,75)(2)} \right] = 690.1 \text{ lbf}$$

The equations developed within Prob. 15-7 are effective.

- 15-10** The catalog rating is 5.2 hp at 1200 rev/min for a straight bevel gearset. Also given: $N_P = 20$ teeth, $N_G = 40$ teeth, $\phi_n = 20^\circ$, $F = 0.71$ in, $J_P = 0.241$, $J_G = 0.201$, $P_d = 10$ teeth/in, through-hardened to 300 Brinell-General Industrial Service, and $Q_v = 5$ uncrowned.

Mesh

$$d_P = 20/10 = 2.000 \text{ in}, \quad d_G = 40/10 = 4.000 \text{ in}$$

$$v_t = \frac{\pi d_P n_P}{12} = \frac{\pi(2)(1200)}{12} = 628.3 \text{ ft/min}$$

$$K_o = 1, \quad S_F = 1, \quad S_H = 1$$

Eq. (15-6): $B = 0.25(12 - 5)^{2/3} = 0.9148$

$$A = 50 + 56(1 - 0.9148) = 54.77$$

Eq. (15-5): $K_v = \left(\frac{54.77 + \sqrt{628.3}}{54.77} \right)^{0.9148} = 1.412$

Eq. (15-10): $K_s = 0.4867 + 0.2132/10 = 0.508$

Eq. (15-11): $K_m = 1.25 + 0.0036(0.71)^2 = 1.252$

where $K_{mb} = 1.25$

Eq. (15-15): $(K_L)_P = 1.6831(10^9)^{-0.0323} = 0.862$

$$(K_L)_G = 1.6831(10^9/2)^{-0.0323} = 0.881$$

Eq. (15-14): $(C_L)_P = 3.4822(10^9)^{-0.0602} = 1.000$

$$(C_L)_G = 3.4822(10^9/2)^{-0.0602} = 1.043$$

Analyze for 10^9 pinion cycles at 0.999 reliability

$$\text{Eq. (15-19):} \quad K_R = 0.50 - 0.25 \log(1 - 0.999) = 1.25$$

$$C_R = \sqrt{K_R} = \sqrt{1.25} = 1.118$$

Bending

Pinion:

$$\text{Eq. (15-23):} \quad (s_{at})_P = 44(300) + 2100 = 15\,300 \text{ psi}$$

$$\text{Eq. (15-4):} \quad (s_{wt})_P = \frac{15\,300(0.862)}{1(1)(1.25)} = 10\,551 \text{ psi}$$

$$\begin{aligned} \text{Eq. (15-3):} \quad W^t &= \frac{(s_{wt})_P F K_x J_P}{P_d K_o K_v K_s K_m} \\ &= \frac{10\,551(0.71)(1)(0.241)}{10(1)(1.412)(0.508)(1.252)} = 201 \text{ lbf} \end{aligned}$$

$$H_1 = \frac{201(628.3)}{33\,000} = 3.8 \text{ hp}$$

Gear:

$$(s_{at})_G = 15\,300 \text{ psi}$$

$$\text{Eq. (15-4):} \quad (s_{wt})_G = \frac{15\,300(0.881)}{1(1)(1.25)} = 10\,783 \text{ psi}$$

$$\text{Eq. (15-3):} \quad W^t = \frac{10\,783(0.71)(1)(0.201)}{10(1)(1.412)(0.508)(1.252)} = 171.4 \text{ lbf}$$

$$H_2 = \frac{171.4(628.3)}{33\,000} = 3.3 \text{ hp}$$

Wear

Pinion:

$$(C_H)_G = 1, \quad I = 0.078, \quad C_p = 2290\sqrt{\text{psi}}, \quad C_{xc} = 2$$

$$C_s = 0.125(0.71) + 0.4375 = 0.526\,25$$

$$\text{Eq. (15-22):} \quad (s_{ac})_P = 341(300) + 23\,620 = 125\,920 \text{ psi}$$

$$(\sigma_{c,\text{all}})_P = \frac{125\,920(1)(1)}{1(1)(1.118)} = 112\,630 \text{ psi}$$

$$\begin{aligned} \text{Eq. (15-1):} \quad W^t &= \left[\frac{(\sigma_{c,\text{all}})_P}{C_p} \right]^2 \frac{F d_p I}{K_o K_v K_m C_s C_{xc}} \\ &= \left(\frac{112\,630}{2290} \right)^2 \left[\frac{0.71(2.000)(0.078)}{1(1.412)(1.252)(0.526\,25)(2)} \right] \\ &= 144.0 \text{ lbf} \end{aligned}$$

$$H_3 = \frac{144(628.3)}{33\,000} = 2.7 \text{ hp}$$

Gear:

$$(s_{ac})_G = 125\,920 \text{ psi}$$

$$(\sigma_{c,all}) = \frac{125\,920(1.043)(1)}{1(1)(1.118)} = 117\,473 \text{ psi}$$

$$W^t = \left(\frac{117\,473}{2290} \right)^2 \left[\frac{0.71(2.000)(0.078)}{1(1.412)(1.252)(0.526\,25)(2)} \right] = 156.6 \text{ lbf}$$

$$H_4 = \frac{156.6(628.3)}{33\,000} = 3.0 \text{ hp}$$

Rating:

$$H = \min(3.8, 3.3, 2.7, 3.0) = 2.7 \text{ hp}$$

Pinion wear controls the power rating. While the basis of the catalog rating is unknown, it is overly optimistic (by a factor of 1.9).

15-11 From Ex. 15-1, the core hardness of both the pinion and gear is 180 Brinell. So $(H_B)_{11}$ and $(H_B)_{21}$ are 180 Brinell and the bending stress numbers are:

$$(s_{at})_P = 44(180) + 2100 = 10\,020 \text{ psi}$$

$$(s_{at})_G = 10\,020 \text{ psi}$$

The contact strength of the gear case, based upon the equation derived in Prob. 15-7, is

$$(s_{ac})_G = \frac{C_p}{(C_L)_G C_H} \sqrt{\frac{S_H^2}{S_F} \left(\frac{(s_{at})_P (K_L)_P K_x J_P K_T C_s C_{xc}}{N_P I K_s} \right)}$$

Substituting $(s_{at})_P$ from above and the values of the remaining terms from Ex. 15-1,

$$\frac{2290}{1.32(1)} \sqrt{\frac{1.5^2}{1.5} \left(\frac{10\,020(1)(1)(0.216)(1)(0.575)(2)}{25(0.065)(0.529)} \right)} = 114\,331 \text{ psi}$$

$$(H_B)_{22} = \frac{114\,331 - 23\,620}{341} = 266 \text{ Brinell}$$

The pinion contact strength is found using the relation from Prob. 15-7:

$$(s_{ac})_P = (s_{ac})_G m_G^{0.0602} C_H = 114\,331(1)^{0.0602}(1) = 114\,331 \text{ psi}$$

$$(H_B)_{12} = \frac{114\,331 - 23\,600}{341} = 266 \text{ Brinell}$$

	Core	Case
Pinion	180	266
Gear	180	266

Realization of hardnesses

The response of students to this part of the question would be a function of the extent to which heat-treatment procedures were covered in their materials and manufacturing

prerequisites, and how quantitative it was. The most important thing is to have the student think about it.

The instructor can comment in class when students curiosity is heightened. Options that will surface may include:

- Select a through-hardening steel which will meet or exceed core hardness in the hot-rolled condition, then heat-treating to gain the additional 86 points of Brinell hardness by bath-quenching, then tempering, then generating the teeth in the blank.
- Flame or induction hardening are possibilities.
- The hardness goal for the case is sufficiently modest that carburizing and case hardening may be too costly. In this case the material selection will be different.
- The initial step in a nitriding process brings the core hardness to 33–38 Rockwell C-scale (about 300–350 Brinell) which is too much.

Emphasize that development procedures are necessary in order to tune the “Black Art” to the occasion. Manufacturing personnel know what to do and the direction of adjustments, but how much is obtained by asking the gear (or gear blank). Refer your students to D. W. Dudley, *Gear Handbook*, library reference section, for descriptions of heat-treating processes.

15-12 Computer programs will vary.

15-13 A design program would ask the user to make the a priori decisions, as indicated in Sec. 15-5, p. 786, SMED8. The decision set can be organized as follows:

A priori decisions

- Function: $H, K_o, \text{rpm}, m_G, \text{temp.}, N_L, R$
- Design factor: n_d ($S_F = n_d, S_H = \sqrt{n_d}$)
- Tooth system: Involute, Straight Teeth, Crowning, ϕ_n
- Straddling: K_{mb}
- Tooth count: $N_P(N_G = m_G N_P)$

Design decisions

- Pitch and Face: P_d, F
- Quality number: Q_v
- Pinion hardness: $(H_B)_1, (H_B)_3$
- Gear hardness: $(H_B)_2, (H_B)_4$

First gather all of the equations one needs, then arrange them before coding. Find the required hardnesses, express the consequences of the chosen hardnesses, and allow for revisions as appropriate.

	Pinion Bending	Gear Bending	Pinion Wear	Gear Wear
Load-induced stress (Allowable stress)	$s_t = \frac{W^t P K_o K_v K_m K_s}{F K_x J_P} = s_{11}$	$s_t = \frac{W^t P K_o K_v K_m K_s}{F K_x J_G} = s_{21}$	$\sigma_c = C_p \left(\frac{W^t K_o K_v C_s C_{xc}}{F d_p I} \right)^{1/2} = s_{12}$	$s_{22} = s_{12}$
Tabulated strength	$(s_{at})_P = \frac{s_{11} S_F K_T K_R}{(K_L)_P}$	$(s_{at})_G = \frac{s_{21} S_F K_T K_R}{(K_L)_G}$	$(s_{ac})_P = \frac{s_{12} S_H K_T C_R}{(C_L)_P (C_H)_P}$	$(s_{ac})_G = \frac{s_{22} S_H K_T C_R}{(C_L)_G (C_H)_G}$
Associated hardness	$\text{Bhn} = \begin{cases} \frac{(s_{at})_P - 2100}{44} \\ \frac{(s_{at})_P - 5980}{48} \end{cases}$	$\text{Bhn} = \begin{cases} \frac{(s_{at})_G - 2100}{44} \\ \frac{(s_{at})_G - 5980}{48} \end{cases}$	$\text{Bhn} = \begin{cases} \frac{(s_{ac})_P - 23\,620}{341} \\ \frac{(s_{ac})_P - 29\,560}{363.6} \end{cases}$	$\text{Bhn} = \begin{cases} \frac{(s_{ac})_G - 23\,620}{341} \\ \frac{(s_{ac})_G - 29\,560}{363.6} \end{cases}$
Chosen hardness	$(H_B)_{11}$	$(H_B)_{21}$	$(H_B)_{12}$	$(H_B)_{22}$
New tabulated strength	$(s_{at})_P = \begin{cases} 44(H_B)_{11} + 2100 \\ 48(H_B)_{11} + 5980 \end{cases}$	$(s_{at})_G = \begin{cases} 44(H_B)_{21} + 2100 \\ 48(H_B)_{21} + 5980 \end{cases}$	$(s_{ac})_P = \begin{cases} 341(H_B)_{12} + 23\,620 \\ 363.6(H_B)_{12} + 29\,560 \end{cases}$	$(s_{ac})_G = \begin{cases} 341(H_B)_{22} + 23\,620 \\ 363.6(H_B)_{22} + 29\,560 \end{cases}$
Factor of safety	$n_{11} = \frac{\sigma_{\text{all}}}{\sigma} = \frac{(s_{at})_P (K_L)_P}{s_{11} K_T K_R}$	$n_{21} = \frac{(s_{at})_G (K_L)_G}{s_{21} K_T K_R}$	$n_{12} = \left[\frac{(s_{ac})_P (C_L)_P (C_H)_P}{s_{12} K_T C_R} \right]^2$	$n_{22} = \left[\frac{(s_{ac})_G (C_L)_G (C_H)_G}{s_{22} K_T C_R} \right]^2$
<i>Note:</i> $S_F = n_d$, $S_H = \sqrt{S_F}$				

15-14 $N_W = 1$, $N_G = 56$, $P_t = 8$ teeth/in, $d = 1.5$ in, $H_o = 1$ hp, $\phi_n = 20^\circ$, $t_a = 70^\circ\text{F}$,
 $K_a = 1.25$, $n_d = 1$, $F_e = 2$ in, $A = 850$ in²

(a) $m_G = N_G/N_W = 56$, $D = N_G/P_t = 56/8 = 7.0$ in

$$p_x = \pi/8 = 0.3927 \text{ in}, \quad C = 1.5 + 7 = 8.5 \text{ in}$$

Eq. (15-39): $a = p_x/\pi = 0.3927/\pi = 0.125$ in

Eq. (15-40): $b = 0.3683p_x = 0.1446$ in

Eq. (15-41): $h_t = 0.6866p_x = 0.2696$ in

Eq. (15-42): $d_o = 1.5 + 2(0.125) = 1.75$ in

Eq. (15-43): $d_r = 3 - 2(0.1446) = 2.711$ in

Eq. (15-44): $D_t = 7 + 2(0.125) = 7.25$ in

Eq. (15-45): $D_r = 7 - 2(0.1446) = 6.711$ in

Eq. (15-46): $c = 0.1446 - 0.125 = 0.0196$ in

Eq. (15-47): $(F_W)_{\max} = 2\sqrt{2(7)(0.125)} = 2.646$ in

$$V_W = \pi(1.5)(1725/12) = 677.4 \text{ ft/min}$$

$$V_G = \frac{\pi(7)(1725/56)}{12} = 56.45 \text{ ft/min}$$

Eq. (13-28): $L = p_x N_W = 0.3927$ in, $\lambda = \tan^{-1} \left(\frac{0.3927}{\pi(1.5)} \right) = 4.764^\circ$

$$P_n = \frac{P_t}{\cos \lambda} = \frac{8}{\cos 4.764^\circ} = 8.028$$

$$p_n = \frac{\pi}{P_n} = 0.3913 \text{ in}$$

Eq. (15-62): $V_s = \frac{\pi(1.5)(1725)}{12 \cos 4.764^\circ} = 679.8 \text{ ft/min}$

(b) Eq. (15-38): $f = 0.103 \exp[-0.110(679.8)^{0.450}] + 0.012 = 0.0250$

Eq. (15-54): The efficiency is,

$$e = \frac{\cos \phi_n - f \tan \lambda}{\cos \phi_n + f \cot \lambda} = \frac{\cos 20^\circ - 0.0250 \tan 4.764^\circ}{\cos 20^\circ + 0.0250 \cot 4.764^\circ} = 0.7563 \quad \text{Ans.}$$

Eq. (15-58): $W_G^t = \frac{33\,000 n_d H_o K_a}{V_G e} = \frac{33\,000(1)(1)(1.25)}{56.45(0.7563)} = 966 \text{ lbf} \quad \text{Ans.}$

Eq. (15-57): $W_W^t = W_G^t \left(\frac{\cos \phi_n \sin \lambda + f \cos \lambda}{\cos \phi_n \cos \lambda - f \sin \lambda} \right)$
 $= 966 \left(\frac{\cos 20^\circ \sin 4.764^\circ + 0.025 \cos 4.764^\circ}{\cos 20^\circ \cos 4.764^\circ - 0.025 \sin 4.764^\circ} \right) = 106.4 \text{ lbf} \quad \text{Ans.}$

(c) Eq. (15-33): $C_s = 1190 - 477 \log 7.0 = 787$

Eq. (15-36): $C_m = 0.0107 \sqrt{-56^2 + 56(56) + 5145} = 0.767$

Eq. (15-37): $C_v = 0.659 \exp[-0.0011(679.8)] = 0.312$

Eq. (15-38): $(W^t)_{\text{all}} = 787(7)^{0.8}(2)(0.767)(0.312) = 1787 \text{ lbf}$

Since $W_G^t < (W^t)_{\text{all}}$, the mesh will survive at least 25 000 h.

Eq. (15-61): $W_f = \frac{0.025(966)}{0.025 \sin 4.764^\circ - \cos 20^\circ \cos 4.764^\circ} = -29.5 \text{ lbf}$

Eq. (15-63): $H_f = \frac{29.5(679.8)}{33\,000} = 0.608 \text{ hp}$

$$H_W = \frac{106.4(677.4)}{33\,000} = 2.18 \text{ hp}$$

$$H_G = \frac{966(56.45)}{33\,000} = 1.65 \text{ hp}$$

The mesh is sufficient *Ans.*

$$P_n = P_t / \cos \lambda = 8 / \cos 4.764^\circ = 8.028$$

$$p_n = \pi / 8.028 = 0.3913 \text{ in}$$

$$\sigma_G = \frac{966}{0.3913(0.5)(0.125)} = 39\,500 \text{ psi}$$

The stress is high. At the rated horsepower,

$$\sigma_G = \frac{1}{1.65} 39\,500 = 23\,940 \text{ psi} \quad \text{acceptable}$$

(d) Eq. (15-52): $A_{\text{min}} = 43.2(8.5)^{1.7} = 1642 \text{ in}^2 < 1700 \text{ in}^2$

Eq. (15-49): $H_{\text{loss}} = 33\,000(1 - 0.7563)(2.18) = 17\,530 \text{ ft} \cdot \text{lbf}/\text{min}$

Assuming a fan exists on the worm shaft,

Eq. (15-50): $\dot{h}_{CR} = \frac{1725}{3939} + 0.13 = 0.568 \text{ ft} \cdot \text{lbf}/(\text{min} \cdot \text{in}^2 \cdot ^\circ\text{F})$

Eq. (15-51): $t_s = 70 + \frac{17\,530}{0.568(1700)} = 88.2^\circ\text{F} \quad \text{Ans.}$

15-15 to 15-22

Problem statement values of 25 hp, 1125 rev/min, $m_G = 10$, $K_a = 1.25$, $n_d = 1.1$, $\phi_h = 20^\circ$, $t_d = 70^\circ\text{F}$ are not referenced in the table.

Parameters Selected	15-15	15-16	15-17	15-18	15-19	15-20	15-21	15-22
#1 p_x	1.75	1.75	1.75	1.75	1.75	1.75	1.75	1.75
#2 d_w	3.60	3.60	3.60	3.60	3.60	4.10	3.60	3.60
#3 F_G	2.40	1.68	1.43	1.69	2.40	2.25	2.4	2.4
#4 A	2000	2000	2000	2000	2000	2000	2500	2600
H_w	38.2	38.2	38.2	38.2	38.2	38.0	FAN	FAN
H_G	36.2	36.2	36.2	36.2	36.2	36.1	41.2	41.2
H_f	1.87	1.47	1.97	1.97	1.97	1.85	37.7	37.7
N_w	3	3	3	3	3	3	3	3
N_G	30	30	30	30	30	30	30	30
K_w				125		50		185
C_s	607	854	1000					
C_m	0.759	0.759	0.759					
C_v	0.236	0.236	0.236					
V_G	492	492	492	492	492	563	492	492
W_G^t	2430	2430	2430	2430	2430	2120	2524	2524
W_w^t	1189	1189	1189	1189	1189	1038	1284	1284
f	0.0193	0.0193	0.0193	0.0193	0.0193	0.0183	0.034	0.034
e	0.948	0.948	0.948	0.948	0.948	0.951	0.913	0.913
$(P_1)G$	1.795	1.795	1.795	1.795	1.795	1.571	1.795	1.795
P_n	1.979	1.979	1.979	1.979	1.979	1.732	1.979	1.979
C-to-C	10.156	10.156	10.156	10.156	10.156	11.6	10.156	10.156
t_s	177	177	177	177	177	171	179.6	179.6
L	5.25	5.25	5.25	5.25	5.25	6.0	5.25	5.25
λ	24.9	24.9	24.9	24.9	24.9	24.98	24.9	24.9
σ_G	5103	7290	8565	7247	5103	4158	5301	5301
d_G	16.71	16.71	16.71	16.71	16.71	19.099	16.7	16.71

Chapter 16

16-1

(a) $\theta_1 = 0^\circ$, $\theta_2 = 120^\circ$, $\theta_a = 90^\circ$, $\sin \theta_a = 1$, $a = 5$ in

$$\text{Eq. (16-2): } M_f = \frac{0.28 p_a (1.5)(6)}{1} \int_{0^\circ}^{120^\circ} \sin \theta (6 - 5 \cos \theta) d\theta$$

$$= 17.96 p_a \text{ lbf} \cdot \text{in}$$

$$\text{Eq. (16-3): } M_N = \frac{p_a (1.5)(6)(5)}{1} \int_{0^\circ}^{120^\circ} \sin^2 \theta d\theta = 56.87 p_a \text{ lbf} \cdot \text{in}$$

$$c = 2(5 \cos 30^\circ) = 8.66 \text{ in}$$

$$\text{Eq. (16-4): } F = \frac{56.87 p_a - 17.96 p_a}{8.66} = 4.49 p_a$$

$$p_a = F/4.49 = 500/4.49 = 111.4 \text{ psi for cw rotation}$$

$$\text{Eq. (16-7): } 500 = \frac{56.87 p_a + 17.96 p_a}{8.66}$$

$$p_a = 57.9 \text{ psi for ccw rotation}$$

A maximum pressure of 111.4 psi occurs on the RH shoe for cw rotation. *Ans.*

(b) *RH shoe:*

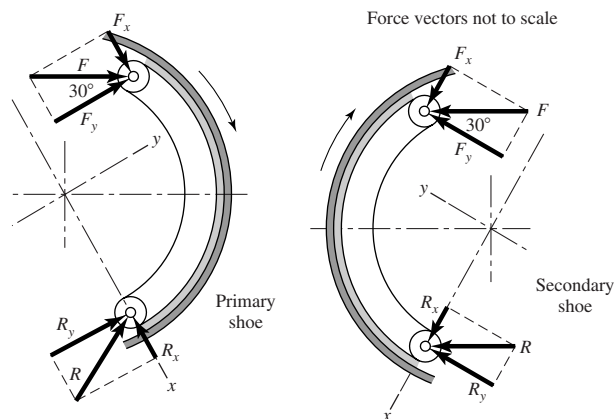
$$\text{Eq. (16-6): } T_R = \frac{0.28(111.4)(1.5)(6)^2(\cos 0^\circ - \cos 120^\circ)}{1} = 2530 \text{ lbf} \cdot \text{in} \quad \textit{Ans.}$$

LH shoe:

$$\text{Eq. (16-6): } T_L = \frac{0.28(57.9)(1.5)(6)^2(\cos 0^\circ - \cos 120^\circ)}{1} = 1310 \text{ lbf} \cdot \text{in} \quad \textit{Ans.}$$

$$T_{\text{total}} = 2530 + 1310 = 3840 \text{ lbf} \cdot \text{in} \quad \textit{Ans.}$$

(c)



$$RH \text{ shoe: } F_x = 500 \sin 30^\circ = 250 \text{ lbf}, \quad F_y = 500 \cos 30^\circ = 433 \text{ lbf}$$

$$\text{Eqs. (16-8): } A = \left(\frac{1}{2} \sin^2 \theta \right)_{0^\circ}^{120^\circ} = 0.375, \quad B = \left(\frac{\theta}{2} - \frac{1}{4} \sin 2\theta \right)_0^{2\pi/3 \text{ rad}} = 1.264$$

$$\text{Eqs. (16-9): } R_x = \frac{111.4(1.5)(6)}{1} [0.375 - 0.28(1.264)] - 250 = -229 \text{ lbf}$$

$$R_y = \frac{111.4(1.5)(6)}{1} [1.264 + 0.28(0.375)] - 433 = 940 \text{ lbf}$$

$$R = [(-229)^2 + (940)^2]^{1/2} = 967 \text{ lbf} \quad \text{Ans.}$$

$$LH \text{ shoe: } F_x = 250 \text{ lbf}, \quad F_y = 433 \text{ lbf}$$

$$\text{Eqs. (16-10): } R_x = \frac{57.9(1.5)(6)}{1} [0.375 + 0.28(1.264)] - 250 = 130 \text{ lbf}$$

$$R_y = \frac{57.9(1.5)(6)}{1} [1.264 - 0.28(0.375)] - 433 = 171 \text{ lbf}$$

$$R = [(130)^2 + (171)^2]^{1/2} = 215 \text{ lbf} \quad \text{Ans.}$$

$$\mathbf{16-2} \quad \theta_1 = 15^\circ, \quad \theta_2 = 105^\circ, \quad \theta_a = 90^\circ, \quad \sin \theta_a = 1, \quad a = 5 \text{ in}$$

$$\text{Eq. (16-2): } M_f = \frac{0.28 p_a (1.5)(6)}{1} \int_{15^\circ}^{105^\circ} \sin \theta (6 - 5 \cos \theta) d\theta = 13.06 p_a$$

$$\text{Eq. (16-3): } M_N = \frac{p_a (1.5)(6)(5)}{1} \int_{15^\circ}^{105^\circ} \sin^2 \theta d\theta = 46.59 p_a$$

$$c = 2(5 \cos 30^\circ) = 8.66 \text{ in}$$

$$\text{Eq. (16-4): } F = \frac{46.59 p_a - 13.06 p_a}{8.66} = 3.872 p_a$$

RH shoe:

$$p_a = 500/3.872 = 129.1 \text{ psi} \quad \text{on RH shoe for cw rotation} \quad \text{Ans.}$$

$$\text{Eq. (16-6): } T_R = \frac{0.28(129.1)(1.5)(6^2)(\cos 15^\circ - \cos 105^\circ)}{1} = 2391 \text{ lbf} \cdot \text{in}$$

LH shoe:

$$500 = \frac{46.59 p_a + 13.06 p_a}{8.66} \Rightarrow p_a = 72.59 \text{ psi} \quad \text{on LH shoe for ccw rotation} \quad \text{Ans.}$$

$$T_L = \frac{0.28(72.59)(1.5)(6^2)(\cos 15^\circ - \cos 105^\circ)}{1} = 1344 \text{ lbf} \cdot \text{in}$$

$$T_{\text{total}} = 2391 + 1344 = 3735 \text{ lbf} \cdot \text{in} \quad \text{Ans.}$$

Comparing this result with that of Prob. 16-1, a 2.7% reduction in torque is achieved by using 25% less braking material.

16-3 Given: $\theta_1 = 0^\circ$, $\theta_2 = 120^\circ$, $\theta_a = 90^\circ$, $\sin \theta_a = 1$, $a = R = 90$ mm, $f = 0.30$, $F = 1000$ N = 1 kN, $r = 280/2 = 140$ mm, counter-clockwise rotation.

LH shoe:

$$\begin{aligned} M_f &= \frac{fp_a br}{\sin \theta_a} \left[r(1 - \cos \theta_2) - \frac{a}{2} \sin^2 \theta_2 \right] \\ &= \frac{0.30 p_a (0.030)(0.140)}{1} \left[0.140(1 - \cos 120^\circ) - \frac{0.090}{2} \sin^2 120^\circ \right] \\ &= 0.000222 p_a \text{ N} \cdot \text{m} \end{aligned}$$

$$\begin{aligned} M_N &= \frac{p_a bra}{\sin \theta_a} \left[\frac{\theta_2}{2} - \frac{1}{4} \sin 2\theta_2 \right] \\ &= \frac{p_a (0.030)(0.140)(0.090)}{1} \left[\frac{120^\circ}{2} \left(\frac{\pi}{180} \right) - \frac{1}{4} \sin 2(120^\circ) \right] \\ &= 4.777(10^{-4}) p_a \text{ N} \cdot \text{m} \end{aligned}$$

$$c = 2r \cos \left(\frac{180^\circ - \theta_2}{2} \right) = 2(0.090) \cos 30^\circ = 0.15588 \text{ m}$$

$$F = 1 = p_a \left[\frac{4.777(10^{-4}) - 2.22(10^{-4})}{0.15588} \right] = 1.64(10^{-3}) p_a$$

$$p_a = 1/1.64(10^{-3}) = 610 \text{ kPa}$$

$$\begin{aligned} T_L &= \frac{fp_a br^2 (\cos \theta_1 - \cos \theta_2)}{\sin \theta_a} \\ &= \frac{0.30(610)(10^3)(0.030)(0.140^2)}{1} [1 - (-0.5)] \\ &= 161.4 \text{ N} \cdot \text{m} \quad \text{Ans.} \end{aligned}$$

RH shoe:

$$M_f = 2.22(10^{-4}) p_a \text{ N} \cdot \text{m}$$

$$M_N = 4.77(10^{-4}) p_a \text{ N} \cdot \text{m}$$

$$c = 0.15588 \text{ m}$$

$$F = 1 = p_a \left[\frac{4.77(10^{-4}) + 2.22(10^{-4})}{0.15588} \right] = 4.49(10^{-3}) p_a$$

$$p_a = \frac{1}{4.49(10^{-3})} = 222.8 \text{ kPa} \quad \text{Ans.}$$

$$T_R = (222.8/610)(161.4) = 59.0 \text{ N} \cdot \text{m} \quad \text{Ans.}$$

16-4

- (a) Given: $\theta_1 = 10^\circ$, $\theta_2 = 75^\circ$, $\theta_a = 75^\circ$, $p_a = 10^6$ Pa, $f = 0.24$,
 $b = 0.075$ m (shoe width), $a = 0.150$ m, $r = 0.200$ m, $d = 0.050$ m, $c = 0.165$ m.

Some of the terms needed are evaluated as:

$$A = \left[r \int_{\theta_1}^{\theta_2} \sin \theta d\theta - a \int_{\theta_1}^{\theta_2} \sin \theta \cos \theta d\theta \right] = r[-\cos \theta]_{\theta_1}^{\theta_2} - a \left[\frac{1}{2} \sin^2 \theta \right]_{\theta_1}^{\theta_2}$$

$$= 200[-\cos \theta]_{10^\circ}^{75^\circ} - 150 \left[\frac{1}{2} \sin^2 \theta \right]_{10^\circ}^{75^\circ} = 77.5 \text{ mm}$$

$$B = \int_{\theta_1}^{\theta_2} \sin^2 \theta d\theta = \left[\frac{\theta}{2} - \frac{1}{4} \sin 2\theta \right]_{10\pi/180 \text{ rad}}^{75\pi/180 \text{ rad}} = 0.528$$

$$C = \int_{\theta_1}^{\theta_2} \sin \theta \cos \theta d\theta = 0.4514$$

Now converting to pascals and meters, we have from Eq. (16-2),

$$M_f = \frac{f p_a b r}{\sin \theta_a} A = \frac{0.24[(10)^6](0.075)(0.200)}{\sin 75^\circ} (0.0775) = 289 \text{ N} \cdot \text{m}$$

From Eq. (16-3),

$$M_N = \frac{p_a b r a}{\sin \theta_a} B = \frac{[(10)^6](0.075)(0.200)(0.150)}{\sin 75^\circ} (0.528) = 1230 \text{ N} \cdot \text{m}$$

Finally, using Eq. (16-4), we have

$$F = \frac{M_N - M_f}{c} = \frac{1230 - 289}{165} = 5.70 \text{ kN} \quad \text{Ans.}$$

- (b) Use Eq. (16-6) for the primary shoe.

$$T = \frac{f p_a b r^2 (\cos \theta_1 - \cos \theta_2)}{\sin \theta_a}$$

$$= \frac{0.24[(10)^6](0.075)(0.200)^2 (\cos 10^\circ - \cos 75^\circ)}{\sin 75^\circ} = 541 \text{ N} \cdot \text{m}$$

For the secondary shoe, we must first find p_a .

Substituting

$$M_N = \frac{1230}{10^6} p_a \quad \text{and} \quad M_f = \frac{289}{10^6} p_a \quad \text{into Eq. (16-7),}$$

$$5.70 = \frac{(1230/10^6) p_a + (289/10^6) p_a}{165}, \quad \text{solving gives } p_a = 619(10)^3 \text{ Pa}$$

Then

$$T = \frac{0.24[0.619(10)^6](0.075)(0.200)^2 (\cos 10^\circ - \cos 75^\circ)}{\sin 75^\circ} = 335 \text{ N} \cdot \text{m}$$

so the braking capacity is $T_{\text{total}} = 2(541) + 2(335) = 1750 \text{ N} \cdot \text{m} \quad \text{Ans.}$

(c) *Primary shoes:*

$$R_x = \frac{p_a b r}{\sin \theta_a} (C - f B) - F_x$$

$$= \frac{(10^6)(0.075)(0.200)}{\sin 75^\circ} [0.4514 - 0.24(0.528)](10)^{-3} - 5.70 = -0.658 \text{ kN}$$

$$R_y = \frac{p_a b r}{\sin \theta_a} (B + f C) - F_y$$

$$= \frac{(10^6)(0.075)(0.200)}{\sin 75^\circ} [0.528 + 0.24(0.4514)](10)^{-3} - 0 = 9.88 \text{ kN}$$

Secondary shoes:

$$R_x = \frac{p_a b r}{\sin \theta_a} (C + f B) - F_x$$

$$= \frac{[0.619(10)^6](0.075)(0.200)}{\sin 75^\circ} [0.4514 + 0.24(0.528)](10)^{-3} - 5.70$$

$$= -0.143 \text{ kN}$$

$$R_y = \frac{p_a b r}{\sin \theta_a} (B - f C) - F_y$$

$$= \frac{[0.619(10)^6](0.075)(0.200)}{\sin 75^\circ} [0.528 - 0.24(0.4514)](10)^{-3} - 0$$

$$= 4.03 \text{ kN}$$

Note from figure that +y for secondary shoe is opposite to +y for primary shoe.

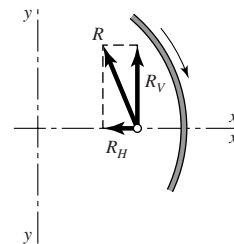
Combining horizontal and vertical components,

$$R_H = -0.658 - 0.143 = -0.801 \text{ kN}$$

$$R_V = 9.88 - 4.03 = 5.85 \text{ kN}$$

$$R = \sqrt{(0.801)^2 + (5.85)^2}$$

$$= 5.90 \text{ kN} \quad \text{Ans.}$$



16-5 Preliminaries: $\theta_1 = 45^\circ - \tan^{-1}(150/200) = 8.13^\circ$, $\theta_2 = 98.13^\circ$

$$\theta_a = 90^\circ, \quad a = [(150)^2 + (200)^2]^{1/2} = 250 \text{ mm}$$

Eq. (16-8): $A = \frac{1}{2} (\sin^2 \theta)_{8.13^\circ}^{98.13^\circ} = 0.480$

Let $C = \int_{\theta_1}^{\theta_2} \sin \theta d\theta = -(\cos \theta)_{8.13^\circ}^{98.13^\circ} = 1.1314$

Eq. (16-2):

$$M_f = \frac{fpabr}{\sin \theta_a}(rC - aA) = \frac{0.25p_a(0.030)(0.150)}{\sin 90^\circ}[0.15(1.1314) - 0.25(0.48)]$$

$$= 5.59(10^{-5})p_a \text{ N} \cdot \text{m}$$

Eq. (16-8): $B = \left(\frac{\theta}{2} - \frac{1}{4} \sin 2\theta\right)_{8.13\pi/180 \text{ rad}}^{98.13\pi/180 \text{ rad}} = 0.925$

Eq. (16-3): $M_N = \frac{pabra}{\sin \theta_a}B = \frac{p_a(0.030)(0.150)(0.250)}{1}(0.925)$

$$= 1.0406(10^{-3})p_a \text{ N} \cdot \text{m}$$

Using $F = (M_N - M_f)/c$, we obtain

$$400 = \frac{104.06 - 5.59}{0.5(10^5)}p_a \quad \text{or} \quad p_a = 203 \text{ kPa} \quad \text{Ans.}$$

$$T = \frac{fpabr^2C}{\sin \theta_a} = \frac{0.25(203)(10^3)(0.030)(0.150)^2}{1}(1.1314)$$

$$= 38.76 \text{ N} \cdot \text{m} \quad \text{Ans.}$$

16-6 For $+3\hat{\sigma}_f$:

$$f = \bar{f} + 3\hat{\sigma}_f = 0.25 + 3(0.025) = 0.325$$

$$M_f = 5.59(10^{-5})p_a \left(\frac{0.325}{0.25}\right) = 7.267(10^{-5})p_a$$

Eq. (16-4):

$$400 = \frac{104.06 - 7.267}{10^5(0.500)}p_a$$

$$p_a = 207 \text{ kPa}$$

$$T = 38.75 \left(\frac{207}{203}\right) \left(\frac{0.325}{0.25}\right) = 51.4 \text{ N} \cdot \text{m} \quad \text{Ans.}$$

Similarly, for $-3\hat{\sigma}_f$:

$$f = \bar{f} - 3\hat{\sigma}_f = 0.25 - 3(0.025) = 0.175$$

$$M_f = 3.913(10^{-5})p_a$$

$$p_a = 200 \text{ kPa}$$

$$T = 26.7 \text{ N} \cdot \text{m} \quad \text{Ans.}$$

16-7 Preliminaries: $\theta_2 = 180^\circ - 30^\circ - \tan^{-1}(3/12) = 136^\circ$, $\theta_1 = 20^\circ - \tan^{-1}(3/12) = 6^\circ$,
 $\theta_a = 90^\circ$, $a = [(3)^2 + (12)^2]^{1/2} = 12.37 \text{ in}$, $r = 10 \text{ in}$, $f = 0.30$, $b = 2 \text{ in}$.

Eq. (16-2): $M_f = \frac{0.30(150)(2)(10)}{\sin 90^\circ} \int_{6^\circ}^{136^\circ} \sin \theta (10 - 12.37 \cos \theta) d\theta$

$$= 12\,800 \text{ lbf} \cdot \text{in}$$

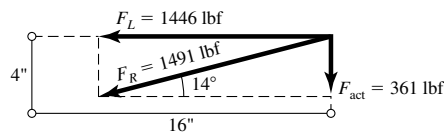
$$\text{Eq. (16-3): } M_N = \frac{150(2)(10)(12.37)}{\sin 90^\circ} \int_6^\circ^{136^\circ} \sin^2 \theta \, d\theta = 53\,300 \text{ lbf} \cdot \text{in}$$

LH shoe:

$$c_L = 12 + 12 + 4 = 28 \text{ in}$$

Now note that M_f is cw and M_N is ccw. Thus,

$$F_L = \frac{53\,300 - 12\,800}{28} = 1446 \text{ lbf}$$



$$\text{Eq. (16-6): } T_L = \frac{0.30(150)(2)(10)^2(\cos 6^\circ - \cos 136^\circ)}{\sin 90^\circ} = 15\,420 \text{ lbf} \cdot \text{in}$$

RH shoe:

$$M_N = 53\,300 \left(\frac{p_a}{150} \right) = 355.3 p_a, \quad M_f = 12\,800 \left(\frac{p_a}{150} \right) = 85.3 p_a$$

On this shoe, both M_N and M_f are ccw.

$$\text{Also } c_R = (24 - 2 \tan 14^\circ) \cos 14^\circ = 22.8 \text{ in}$$

$$F_{act} = F_L \sin 14^\circ = 361 \text{ lbf} \quad \text{Ans.}$$

$$F_R = F_L / \cos 14^\circ = 1491 \text{ lbf}$$

$$\text{Thus } 1491 = \frac{355.3 + 85.3}{22.8} p_a \Rightarrow p_a = 77.2 \text{ psi}$$

$$\text{Then } T_R = \frac{0.30(77.2)(2)(10)^2(\cos 6^\circ - \cos 136^\circ)}{\sin 90^\circ} = 7940 \text{ lbf} \cdot \text{in}$$

$$T_{total} = 15\,420 + 7940 = 23\,400 \text{ lbf} \cdot \text{in} \quad \text{Ans.}$$

16-8

$$M_f = 2 \int_0^{\theta_2} (f dN)(a' \cos \theta - r) \quad \text{where } dN = pbr \, d\theta$$

$$= 2fpbr \int_0^{\theta_2} (a' \cos \theta - r) \, d\theta = 0$$

From which

$$a' \int_0^{\theta_2} \cos \theta \, d\theta = r \int_0^{\theta_2} d\theta$$

$$a' = \frac{r\theta_2}{\sin \theta_2} = \frac{r(60^\circ)(\pi/180)}{\sin 60^\circ} = 1.209r$$

Eq. (16-15)

$$a = \frac{4r \sin 60^\circ}{2(60)(\pi/180) + \sin[2(60)]} = 1.170r$$

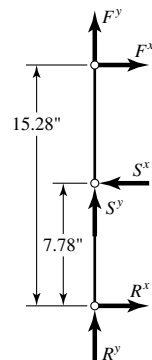
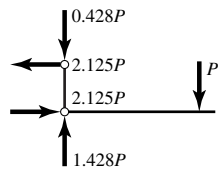
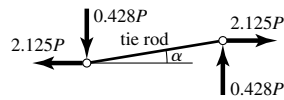
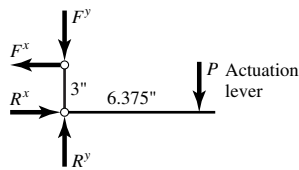
16-9

(a) Counter-clockwise rotation, $\theta_2 = \pi/4$ rad, $r = 13.5/2 = 6.75$ in

$$a = \frac{4r \sin \theta_2}{2\theta_2 + \sin 2\theta_2} = \frac{4(6.75) \sin(\pi/4)}{2\pi/4 + \sin(2\pi/4)} = 7.426 \text{ in}$$

$$e = 2(7.426) = 14.85 \text{ in} \quad \text{Ans.}$$

(b)



$$\alpha = \tan^{-1}(3/14.85) = 11.4^\circ$$

$$\sum M_R = 0 = 3F^x - 6.375P$$

$$F^x = 2.125P$$

$$\sum F_x = 0 = -F^x + R^x$$

$$R^x = F^x = 2.125P$$

$$F^y = F^x \tan 11.4^\circ = 0.428P$$

$$\sum F_y = -P - F^y + R^y$$

$$R^y = P + 0.428P = 1.428P$$

Left shoe lever.

$$\sum M_R = 0 = 7.78S^x - 15.28F^x$$

$$S^x = \frac{15.28}{7.78}(2.125P) = 4.174P$$

$$S^y = f S^x = 0.30(4.174P)$$

$$= 1.252P$$

$$\sum F_y = 0 = R^y + S^y + F^y$$

$$R^y = -F^y - S^y$$

$$= -0.428P - 1.252P$$

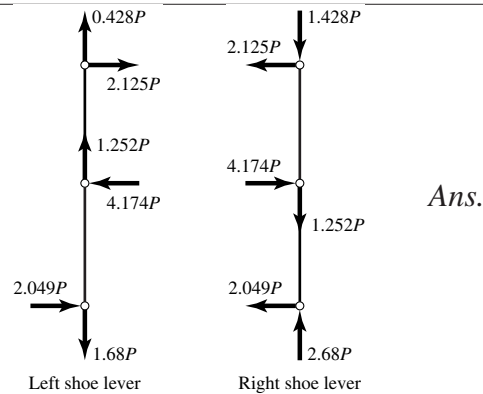
$$= -1.68P$$

$$\sum F_x = 0 = R^x - S^x + F^x$$

$$R^x = S^x - F^x$$

$$= 4.174P - 2.125P$$

$$= 2.049P$$



Ans.

- (c) The direction of brake pulley rotation affects the sense of S^y , which has no effect on the brake shoe lever moment and hence, no effect on S^x or the brake torque.

The brake shoe levers carry identical bending moments but the left lever carries a tension while the right carries compression (column loading). The right lever is designed and used as a left lever, producing interchangeable levers (identical levers). But do not infer from these identical loadings.

16-10 $r = 13.5/2 = 6.75$ in, $b = 7.5$ in, $\theta_2 = 45^\circ$

From Table 16-3 for a rigid, molded nonasbestos use a conservative estimate of $p_a = 100$ psi, $f = 0.31$.

In Eq. (16-16):

$$2\theta_2 + \sin 2\theta_2 = 2(\pi/4) + \sin 2(45^\circ) = 2.571$$

From Prob. 16-9 solution,

$$N = S^x = 4.174P = \frac{p_a b r}{2}(2.571) = 1.285 p_a b r$$

$$P = \frac{1.285}{4.174}(100)(7.5)(6.75) = 1560 \text{ lbf} \quad \text{Ans.}$$

Applying Eq. (16-18) for two shoes,

$$\begin{aligned} T &= 2afN = 2(7.426)(0.31)(4.174)(1560) \\ &= 29\,980 \text{ lbf} \cdot \text{in} \quad \text{Ans.} \end{aligned}$$

16-11 From Eq. (16-22),

$$P_1 = \frac{p_a b D}{2} = \frac{90(4)(14)}{2} = 2520 \text{ lbf} \quad \text{Ans.}$$

$$f\phi = 0.25(\pi)(270^\circ/180^\circ) = 1.178$$

Eq. (16-19): $P_2 = P_1 \exp(-f\phi) = 2520 \exp(-1.178) = 776 \text{ lbf} \quad \text{Ans.}$

$$T = \frac{(P_1 - P_2)D}{2} = \frac{(2520 - 776)14}{2} = 12\,200 \text{ lbf} \cdot \text{in} \quad \text{Ans.}$$

16-12 Given: $D = 300$ mm, $f = 0.28$, $b = 80$ mm, $\phi = 270^\circ$, $P_1 = 7600$ N.

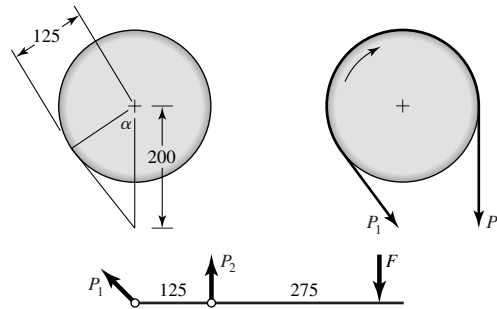
$$f\phi = 0.28(\pi)(270^\circ/180^\circ) = 1.319$$

$$P_2 = P_1 \exp(-f\phi) = 7600 \exp(-1.319) = 2032 \text{ N}$$

$$p_a = \frac{2P_1}{bD} = \frac{2(7600)}{80(300)} = 0.6333 \text{ N/mm}^2 \quad \text{or} \quad 633 \text{ kPa} \quad \text{Ans.}$$

$$\begin{aligned} T &= (P_1 - P_2) \frac{D}{2} = (7600 - 2032) \frac{300}{2} \\ &= 835\,200 \text{ N} \cdot \text{mm} \quad \text{or} \quad 835.2 \text{ N} \cdot \text{m} \quad \text{Ans.} \end{aligned}$$

16-13



$$\alpha = \cos^{-1} \left(\frac{125}{200} \right) = 51.32^\circ$$

$$\phi = 270^\circ - 51.32^\circ = 218.7^\circ$$

$$f\phi = 0.30(218.7) \frac{\pi}{180^\circ} = 1.145$$

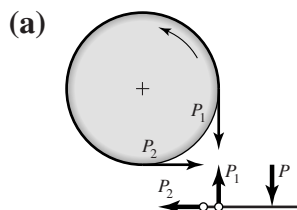
$$P_2 = \frac{(125 + 275)F}{125} = \frac{(125 + 275)400}{125} = 1280 \text{ N} \quad \text{Ans.}$$

$$P_1 = P_2 \exp(f\phi) = 1280 \exp(1.145) = 4022 \text{ N}$$

$$T = (P_1 - P_2) \frac{D}{2} = (4022 - 1280) \frac{250}{2}$$

$$= 342\,750 \text{ N} \cdot \text{mm} \quad \text{or} \quad 343 \text{ N} \cdot \text{m} \quad \text{Ans.}$$

16-14



$$D = 16", \quad b = 3"$$

$$n = 200 \text{ rev/min}$$

$$f = 0.20, \quad p_a = 70 \text{ psi}$$

$$\text{Eq. (16-22):} \quad P_1 = \frac{p_a b D}{2} = \frac{70(3)(16)}{2} = 1680 \text{ lbf}$$

$$f\phi = 0.20(3\pi/2) = 0.942$$

$$\text{Eq. (16-14): } P_2 = P_1 \exp(-f\phi) = 1680 \exp(-0.942) = 655 \text{ lbf}$$

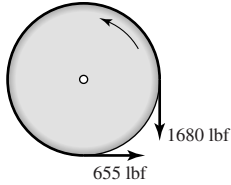
$$T = (P_1 - P_2) \frac{D}{2} = (1680 - 655) \frac{16}{2}$$

$$= 8200 \text{ lbf} \cdot \text{in} \quad \text{Ans.}$$

$$H = \frac{Tn}{63\,025} = \frac{8200(200)}{63\,025} = 26.0 \text{ hp} \quad \text{Ans.}$$

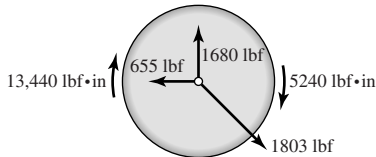
$$P = \frac{3P_1}{10} = \frac{3(1680)}{10} = 504 \text{ lbf} \quad \text{Ans.}$$

(b)



Force of belt on the drum:

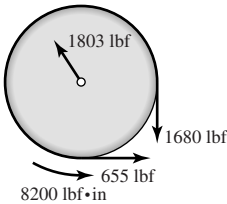
$$R = (1680^2 + 655^2)^{1/2} = 1803 \text{ lbf}$$



Force of shaft on the drum: 1680 and 655 lbf

$$T_{P_1} = 1680(8) = 13\,440 \text{ lbf} \cdot \text{in}$$

$$T_{P_2} = 655(8) = 5240 \text{ lbf} \cdot \text{in}$$



Net torque on drum due to brake band:

$$\begin{aligned} T &= T_{P_1} - T_{P_2} \\ &= 13\,440 - 5240 \\ &= 8200 \text{ lbf} \cdot \text{in} \end{aligned}$$

The radial load on the bearing pair is 1803 lbf. If the bearing is straddle mounted with the drum at center span, the bearing radial load is $1803/2 = 901$ lbf.

(c) Eq. (16-22):

$$p = \frac{2P}{bD}$$

$$p|_{\theta=0^\circ} = \frac{2P_1}{3(16)} = \frac{2(1680)}{3(16)} = 70 \text{ psi} \quad \text{Ans.}$$

As it should be

$$p|_{\theta=270^\circ} = \frac{2P_2}{3(16)} = \frac{2(655)}{3(16)} = 27.3 \text{ psi} \quad \text{Ans.}$$

16-15 Given: $\phi = 270^\circ$, $b = 2.125$ in, $f = 0.20$, $T = 150$ lbf·ft, $D = 8.25$ in, $c_2 = 2.25$ in
Notice that the pivoting rocker is not located on the vertical centerline of the drum.

(a) To have the band tighten for ccw rotation, it is necessary to have $c_1 < c_2$. When friction is fully developed,

$$\frac{P_1}{P_2} = \exp(f\phi) = \exp[0.2(3\pi/2)] = 2.566$$

If friction is not fully developed

$$P_1/P_2 \leq \exp(f\phi)$$

To help visualize what is going on let's add a force W parallel to P_1 , at a lever arm of c_3 . Now sum moments about the rocker pivot.

$$\sum M = 0 = c_3W + c_1P_1 - c_2P_2$$

From which

$$W = \frac{c_2P_2 - c_1P_1}{c_3}$$

The device is self locking for ccw rotation if W is no longer needed, that is, $W \leq 0$. It follows from the equation above

$$\frac{P_1}{P_2} \geq \frac{c_2}{c_1}$$

When friction is fully developed

$$\begin{aligned} 2.566 &= 2.25/c_1 \\ c_1 &= \frac{2.25}{2.566} = 0.877 \text{ in} \end{aligned}$$

When P_1/P_2 is less than 2.566, friction is not fully developed. Suppose $P_1/P_2 = 2.25$, then

$$c_1 = \frac{2.25}{2.25} = 1 \text{ in}$$

We don't want to be at the point of slip, and we need the band to tighten.

$$\frac{c_2}{P_1/P_2} \leq c_1 \leq c_2$$

When the developed friction is very small, $P_1/P_2 \rightarrow 1$ and $c_1 \rightarrow c_2$ Ans.

(b) Rocker has $c_1 = 1$ in

$$\frac{P_1}{P_2} = \frac{c_2}{c_1} = \frac{2.25}{1} = 2.25$$

$$f = \frac{\ln(P_1/P_2)}{\phi} = \frac{\ln 2.25}{3\pi/2} = 0.172$$

Friction is not fully developed, no slip.

$$T = (P_1 - P_2)\frac{D}{2} = P_2 \left(\frac{P_1}{P_2} - 1 \right) \frac{D}{2}$$

Solve for P_2

$$P_2 = \frac{2T}{[(P_1/P_2) - 1]D} = \frac{2(150)(12)}{(2.25 - 1)(8.25)} = 349 \text{ lbf}$$

$$P_1 = 2.25P_2 = 2.25(349) = 785 \text{ lbf}$$

$$p = \frac{2P_1}{bD} = \frac{2(785)}{2.125(8.25)} = 89.6 \text{ psi Ans.}$$

(c) The torque ratio is $150(12)/100$ or 18-fold.

$$P_2 = \frac{349}{18} = 19.4 \text{ lbf}$$

$$P_1 = 2.25P_2 = 2.25(19.4) = 43.6 \text{ lbf}$$

$$p = \frac{89.6}{18} = 4.98 \text{ psi} \quad \text{Ans.}$$

Comment:

As the torque opposed by the locked brake increases, P_2 and P_1 increase (although ratio is still 2.25), then p follows. The brake can self-destruct. Protection could be provided by a shear key.

16-16

(a) From Eq. (16-23), since $F = \frac{\pi p_a d}{2}(D - d)$

then

$$p_a = \frac{2F}{\pi d(D - d)}$$

and it follows that

$$\begin{aligned} p_a &= \frac{2(5000)}{\pi(225)(300 - 225)} \\ &= 0.189 \text{ N/mm}^2 \quad \text{or} \quad 189\,000 \text{ N/m}^2 \quad \text{or} \quad 189 \text{ kPa} \quad \text{Ans.} \end{aligned}$$

$$\begin{aligned} T &= \frac{Ff}{4}(D + d) = \frac{5000(0.25)}{4}(300 + 225) \\ &= 164\,043 \text{ N} \cdot \text{mm} \quad \text{or} \quad 164 \text{ N} \cdot \text{m} \quad \text{Ans.} \end{aligned}$$

(b) From Eq. (16-26),

$$\begin{aligned} F &= \frac{\pi p_a}{4}(D^2 - d^2) \\ p_a &= \frac{4F}{\pi(D^2 - d^2)} = \frac{4(5000)}{\pi(300^2 - 225^2)} \\ &= 0.162 \text{ N/mm}^2 = 162 \text{ kPa} \quad \text{Ans.} \end{aligned}$$

From Eq. (16-27),

$$\begin{aligned} T &= \frac{\pi}{12} f p_a (D^3 - d^3) = \frac{\pi}{12} (0.25)(162)(10^3)(300^3 - 225^3)(10^{-3})^3 \\ &= 166 \text{ N} \cdot \text{m} \quad \text{Ans.} \end{aligned}$$

16-17

(a) Eq. (16-23):

$$F = \frac{\pi p_a d}{2}(D - d) = \frac{\pi(120)(4)}{2}(6.5 - 4) = 1885 \text{ lbf} \quad \text{Ans.}$$

Eq. (16-24):

$$T = \frac{\pi f p_a d}{8} (D^2 - d^2) N = \frac{\pi(0.24)(120)(4)}{8} (6.5^2 - 4^2)(6)$$

$$= 7125 \text{ lbf} \cdot \text{in} \quad \text{Ans.}$$

(b)
$$T = \frac{\pi(0.24)(120d)}{8} (6.5^2 - d^2)(6)$$

$d, \text{ in}$	$T, \text{ lbf} \cdot \text{in}$	
2	5191	
3	6769	
4	7125	<i>Ans.</i>
5	5853	
6	2545	

(c) The torque-diameter curve exhibits a stationary point maximum in the range of diameter d . The clutch has nearly optimal proportions.

16-18

(a)
$$T = \frac{\pi f p_a d (D^2 - d^2) N}{8} = C D^2 d - C d^3$$

Differentiating with respect to d and equating to zero gives

$$\frac{dT}{dd} = C D^2 - 3C d^2 = 0$$

$$d^* = \frac{D}{\sqrt{3}} \quad \text{Ans.}$$

$$\frac{d^2 T}{dd^2} = -6 C d$$

which is negative for all positive d . We have a stationary point *maximum*.

(b)
$$d^* = \frac{6.5}{\sqrt{3}} = 3.75 \text{ in} \quad \text{Ans.}$$

$$T^* = \frac{\pi(0.24)(120)}{8} \left(\frac{6.5}{\sqrt{3}} \right) [6.5^2 - (6.5^2/3)](6) = 7173 \text{ lbf} \cdot \text{in}$$

(c) The table indicates a maximum within the range:

$$3 \leq d \leq 5 \text{ in}$$

(d) Consider:
$$0.45 \leq \frac{d}{D} \leq 0.80$$

Multiply through by D

$$0.45D \leq d \leq 0.80D$$

$$0.45(6.5) \leq d \leq 0.80(6.5)$$

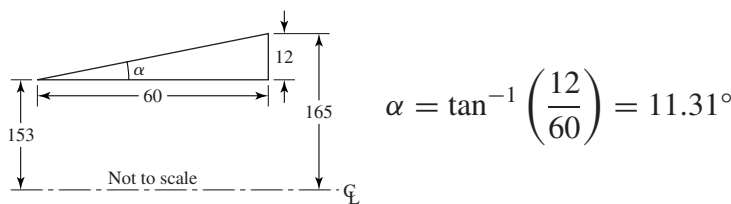
$$2.925 \leq d \leq 5.2 \text{ in}$$

$$\left(\frac{d}{D}\right)^* = d^*/D = \frac{1}{\sqrt{3}} = 0.577$$

which lies within the common range of clutches.

Yes. *Ans.*

16-19 Given: $d = 0.306 \text{ m}$, $l = 0.060 \text{ m}$, $T = 0.200 \text{ kN} \cdot \text{m}$, $D = 0.330 \text{ m}$, $f = 0.26$.



Uniform wear

Eq. (16-45):

$$0.200 = \frac{\pi(0.26)(0.306)p_a}{8 \sin 11.31^\circ} (0.330^2 - 0.306^2) = 0.002432p_a$$

$$p_a = \frac{0.200}{0.002432} = 82.2 \text{ kPa} \quad \text{Ans.}$$

Eq. (16-44):

$$F = \frac{\pi p_a d}{2} (D - d) = \frac{\pi(82.2)(0.306)}{2} (0.330 - 0.306) = 0.949 \text{ kN} \quad \text{Ans.}$$

Uniform pressure

Eq. (16-48):

$$0.200 = \frac{\pi(0.26)p_a}{12 \sin 11.31^\circ} (0.330^3 - 0.306^3) = 0.00253p_a$$

$$p_a = \frac{0.200}{0.00253} = 79.1 \text{ kPa} \quad \text{Ans.}$$

Eq. (16-47):

$$F = \frac{\pi p_a}{4} (D^2 - d^2) = \frac{\pi(79.1)}{4} (0.330^2 - 0.306^2) = 0.948 \text{ kN} \quad \text{Ans.}$$

16-20 *Uniform wear*

Eq. (16-34):
$$T = \frac{1}{2}(\theta_2 - \theta_1) f p_a r_i (r_o^2 - r_i^2)$$

Eq. (16-33): $F = (\theta_2 - \theta_1) p_a r_i (r_o - r_i)$

Thus,
$$\frac{T}{fFD} = \frac{(1/2)(\theta_2 - \theta_1) f p_a r_i (r_o^2 - r_i^2)}{f(\theta_2 - \theta_1) p_a r_i (r_o - r_i)(D)}$$

$$= \frac{r_o + r_i}{2D} = \frac{D/2 + d/2}{2D} = \frac{1}{4} \left(1 + \frac{d}{D} \right) \quad O.K. \quad Ans.$$

Uniform pressure

Eq. (16-38): $T = \frac{1}{3}(\theta_2 - \theta_1) f p_a (r_o^3 - r_i^3)$

Eq. (16-37):

$$F = \frac{1}{2}(\theta_2 - \theta_1) p_a (r_o^2 - r_i^2)$$

$$\frac{T}{fFD} = \frac{(1/3)(\theta_2 - \theta_1) f p_a (r_o^3 - r_i^3)}{(1/2) f (\theta_2 - \theta_1) p_a (r_o^2 - r_i^2) D} = \frac{2}{3} \left\{ \frac{(D/2)^3 - (d/2)^3}{[(D/2)^2 - (d/2)^2] D} \right\}$$

$$= \frac{2(D/2)^3(1 - (d/D)^3)}{3(D/2)^2[1 - (d/D)^2]D} = \frac{1}{3} \left[\frac{1 - (d/D)^3}{1 - (d/D)^2} \right] \quad O.K. \quad Ans.$$

16-21

$$\omega = 2\pi n/60 = 2\pi 500/60 = 52.4 \text{ rad/s}$$

$$T = \frac{H}{\omega} = \frac{2(10^3)}{52.4} = 38.2 \text{ N} \cdot \text{m}$$

Key:

$$F = \frac{T}{r} = \frac{38.2}{12} = 3.18 \text{ kN}$$

Average shear stress in key is

$$\tau = \frac{3.18(10^3)}{6(40)} = 13.2 \text{ MPa} \quad Ans.$$

Average bearing stress is

$$\sigma_b = -\frac{F}{A_b} = -\frac{3.18(10^3)}{3(40)} = -26.5 \text{ MPa} \quad Ans.$$

Let one jaw carry the entire load.

$$r_{av} = \frac{1}{2} \left(\frac{26}{2} + \frac{45}{2} \right) = 17.75 \text{ mm}$$

$$F = \frac{T}{r_{av}} = \frac{38.2}{17.75} = 2.15 \text{ kN}$$

The bearing and shear stress estimates are

$$\sigma_b = \frac{-2.15(10^3)}{10(22.5 - 13)} = -22.6 \text{ MPa} \quad \text{Ans.}$$

$$\tau = \frac{2.15(10^3)}{10[0.25\pi(17.75)^2]} = 0.869 \text{ MPa} \quad \text{Ans.}$$

16-22

$$\omega_1 = 2\pi n/60 = 2\pi(1800)/60 = 188.5 \text{ rad/s}$$

$$\omega_2 = 0$$

From Eq. (16-51),

$$\frac{I_1 I_2}{I_1 + I_2} = \frac{T t_1}{\omega_1 - \omega_2} = \frac{320(8.3)}{188.5 - 0} = 14.09 \text{ N} \cdot \text{m} \cdot \text{s}^2$$

Eq. (16-52):

$$E = 14.09 \left(\frac{188.5^2}{2} \right) (10^{-3}) = 250 \text{ kJ}$$

Eq. (16-55):

$$\Delta T = \frac{E}{C_p m} = \frac{250(10^3)}{500(18)} = 27.8^\circ\text{C} \quad \text{Ans.}$$

16-23

$$n = \frac{n_1 + n_2}{2} = \frac{260 + 240}{2} = 250 \text{ rev/min}$$

$$C_s = \frac{260 - 240}{250} = 0.08 \quad \text{Ans.}$$

$$\omega = 2\pi(250)/60 = 26.18 \text{ rad/s}$$

$$I = \frac{E_2 - E_1}{C_s \omega^2} = \frac{5000(12)}{0.08(26.18)^2} = 1094 \text{ lbf} \cdot \text{in} \cdot \text{s}^2$$

$$I_x = \frac{m}{8} (d_o^2 + d_i^2) = \frac{W}{8g} (d_o^2 + d_i^2)$$

$$W = \frac{8gI}{d_o^2 + d_i^2} = \frac{8(386)(1094)}{60^2 + 56^2} = 502 \text{ lbf}$$

$$w = 0.260 \text{ lbf/in}^3 \quad \text{for cast iron}$$

$$V = \frac{W}{w} = \frac{502}{0.260} = 1931 \text{ in}^3$$

Also,
$$V = \frac{\pi t}{4} (d_o^2 - d_i^2) = \frac{\pi t}{4} (60^2 - 56^2) = 364t \text{ in}^3$$

Equating the expressions for volume and solving for t ,

$$t = \frac{1931}{364} = 5.3 \text{ in} \quad \text{Ans.}$$

16-24 (a) The useful work performed in one revolution of the crank shaft is

$$U = 35(2000)(8)(0.15) = 84(10^3) \text{ in} \cdot \text{lbf}$$

Accounting for friction, the total work done in one revolution is

$$U = 84(10^3)/(1 - 0.16) = 100(10^3) \text{ in} \cdot \text{lbf}$$

Since 15% of the crank shaft stroke is 7.5% of a crank shaft revolution, the energy fluctuation is

$$E_2 - E_1 = 84(10^3) - 100(10^3)(0.075) = 76.5(10^3) \text{ in} \cdot \text{lbf} \quad \text{Ans.}$$

(b) For the flywheel

$$n = 6(90) = 540 \text{ rev/min}$$

$$\omega = \frac{2\pi n}{60} = \frac{2\pi(540)}{60} = 56.5 \text{ rad/s}$$

Since $C_s = 0.10$

$$I = \frac{E_2 - E_1}{C_s \omega^2} = \frac{76.5(10^3)}{0.10(56.5)^2} = 239.6 \text{ lbf} \cdot \text{in} \cdot \text{s}^2$$

Assuming all the mass is concentrated at the effective diameter, d ,

$$I = \frac{md^2}{4}$$

$$W = \frac{4gI}{d^2} = \frac{4(386)(239.6)}{48^2} = 161 \text{ lbf} \quad \text{Ans.}$$

16-25 Use Ex. 16-6 and Table 16-6 data for one cylinder of a 3-cylinder engine.

$$C_s = 0.30$$

$$n = 2400 \text{ rev/min or } 251 \text{ rad/s}$$

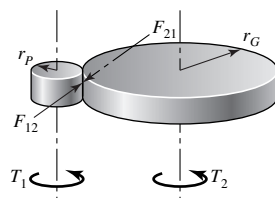
$$T_m = \frac{3(3368)}{4\pi} = 804 \text{ in} \cdot \text{lbf} \quad \text{Ans.}$$

$$E_2 - E_1 = 3(3531) = 10\,590 \text{ in} \cdot \text{lbf}$$

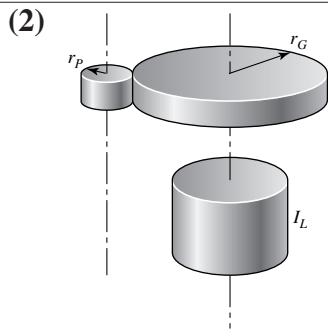
$$I = \frac{E_2 - E_1}{C_s \omega^2} = \frac{10\,590}{0.30(251)^2} = 0.560 \text{ in} \cdot \text{lbf} \cdot \text{s}^2 \quad \text{Ans.}$$

16-26 (a)

(1)



$$(T_2)_1 = -F_{21}r_P = -\frac{T_2}{r_G}r_P = \frac{T_2}{-n} \quad \text{Ans.}$$



Equivalent energy

$$(1/2)I_2\omega_2^2 = (1/2)(I_2)_1(\omega_1^2)$$

$$(I_2)_1 = \frac{\omega_2^2}{\omega_1^2}I_2 = \frac{I_2}{n^2} \quad \text{Ans.}$$

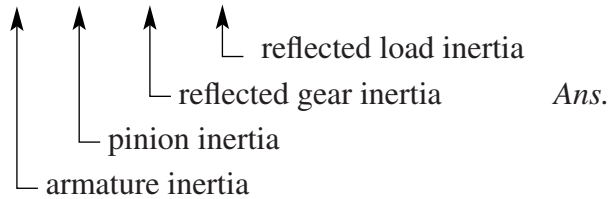
(3)
$$\frac{I_G}{I_P} = \left(\frac{r_G}{r_P}\right)^2 \left(\frac{m_G}{m_P}\right) = \left(\frac{r_G}{r_P}\right)^2 \left(\frac{r_G}{r_P}\right)^2 = n^4$$

From (2)
$$(I_2)_1 = \frac{I_G}{n^2} = \frac{n^4 I_P}{n^2} = n^2 I_P \quad \text{Ans.}$$

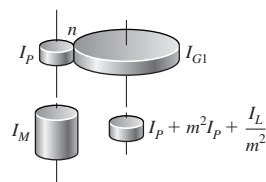
(b)
$$I_e = I_M + I_P + n^2 I_P + \frac{I_L}{n^2} \quad \text{Ans.}$$

(c)
$$I_e = 10 + 1 + 10^2(1) + \frac{100}{10^2}$$

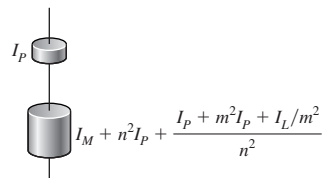
$$= 10 + 1 + 100 + 1 = 112$$



16-27 (a) Reflect I_L, I_{G2} to the center shaft



Reflect the center shaft to the motor shaft



$$I_e = I_M + I_P + n^2 I_P + \frac{I_P}{n^2} + \frac{m^2}{n^2} I_P + \frac{I_L}{m^2 n^2} \quad \text{Ans.}$$

(b) For $R = \text{constant} = nm$, $I_e = I_M + I_P + n^2 I_P + \frac{I_P}{n^2} + \frac{R^2 I_P}{n^4} + \frac{I_L}{R^2}$ Ans.

(c) For $R = 10$, $\frac{\partial I_e}{\partial n} = 0 + 0 + 2n(1) - \frac{2(1)}{n^3} - \frac{4(10^2)(1)}{n^5} + 0 = 0$

$$n^6 - n^2 - 200 = 0$$

From which

$$n^* = 2.430 \quad \text{Ans.}$$

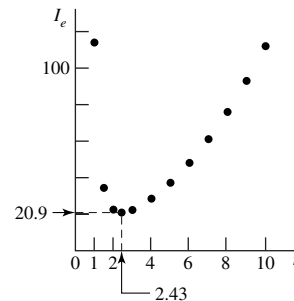
$$m^* = \frac{10}{2.430} = 4.115 \quad \text{Ans.}$$

Notice that n^* and m^* are independent of I_L .

16-28 From Prob. 16-27,

$$\begin{aligned} I_e &= I_M + I_P + n^2 I_P + \frac{I_P}{n^2} + \frac{R^2 I_P}{n^4} + \frac{I_L}{R^2} \\ &= 10 + 1 + n^2(1) + \frac{1}{n^2} + \frac{100(1)}{n^4} + \frac{100}{10^2} \\ &= 10 + 1 + n^2 + \frac{1}{n^2} + \frac{100}{n^4} + 1 \end{aligned}$$

n	I_e
1.00	114.00
1.50	34.40
2.00	22.50
2.43	20.90
3.00	22.30
4.00	28.50
5.00	37.20
6.00	48.10
7.00	61.10
8.00	76.00
9.00	93.00
10.00	112.02



Optimizing the partitioning of a double reduction lowered the gear-train inertia to $20.9/112 = 0.187$, or to 19% of that of a single reduction. This includes the two additional gears.

16-29 Figure 16-29 applies,

$$t_2 = 10 \text{ s}, \quad t_1 = 0.5 \text{ s}$$

$$\frac{t_2 - t_1}{t_1} = \frac{10 - 0.5}{0.5} = 19$$

The load torque, as seen by the motor shaft (Rule 1, Prob. 16-26), is

$$T_L = \left| \frac{1300(12)}{10} \right| = 1560 \text{ lbf} \cdot \text{in}$$

The rated motor torque T_r is

$$T_r = \frac{63\,025(3)}{1125} = 168.07 \text{ lbf} \cdot \text{in}$$

For Eqs. (16-65):

$$\omega_r = \frac{2\pi}{60}(1125) = 117.81 \text{ rad/s}$$

$$\omega_s = \frac{2\pi}{60}(1200) = 125.66 \text{ rad/s}$$

$$a = \frac{-T_r}{\omega_s - \omega_r} = -\frac{168.07}{125.66 - 117.81} = -21.41$$

$$b = \frac{T_r \omega_s}{\omega_s - \omega_r} = \frac{168.07(125.66)}{125.66 - 117.81} = 2690.4 \text{ lbf} \cdot \text{in}$$

The linear portion of the squirrel-cage motor characteristic can now be expressed as

$$T_M = -21.41\omega + 2690.4 \text{ lbf} \cdot \text{in}$$

Eq. (16-68):

$$T_2 = 168.07 \left(\frac{1560 - 168.07}{1560 - T_2} \right)^{19}$$

One root is 168.07 which is for infinite time. The root for 10 s is wanted. Use a successive substitution method

T_2	New T_2
0.00	19.30
19.30	24.40
24.40	26.00
26.00	26.50
26.50	26.67

Continue until convergence.

$$T_2 = 26.771$$

Eq. (16-69):

$$I = \frac{-21.41(10 - 0.5)}{\ln(26.771/168.07)} = 110.72 \text{ in} \cdot \text{lbf} \cdot \text{s/rad}$$

$$\omega = \frac{T - b}{a}$$

$$\omega_{\max} = \frac{T_2 - b}{a} = \frac{26.771 - 2690.4}{-21.41} = 124.41 \text{ rad/s} \quad \text{Ans.}$$

$$\omega_{\min} = 117.81 \text{ rad/s} \quad \text{Ans.}$$

$$\bar{\omega} = \frac{124.41 + 117.81}{2} = 121.11 \text{ rad/s}$$

$$C_s = \frac{\omega_{\max} - \omega_{\min}}{(\omega_{\max} + \omega_{\min})/2} = \frac{124.41 - 117.81}{(124.41 + 117.81)/2} = 0.0545 \quad \text{Ans.}$$

$$E_1 = \frac{1}{2} I \omega_r^2 = \frac{1}{2} (110.72)(117.81)^2 = 768\,352 \text{ in} \cdot \text{lb}$$

$$E_2 = \frac{1}{2} I \omega_2^2 = \frac{1}{2} (110.72)(124.41)^2 = 856\,854 \text{ in} \cdot \text{lb}$$

$$\Delta E = E_1 - E_2 = 768\,352 - 856\,854 = -88\,502 \text{ in} \cdot \text{lb}$$

Eq. (16-64):

$$\begin{aligned} \Delta E &= C_s I \bar{\omega}^2 = 0.0545(110.72)(121.11)^2 \\ &= 88\,508 \text{ in} \cdot \text{lb}, \quad \text{close enough} \quad \text{Ans.} \end{aligned}$$

During the punch

$$T = \frac{63\,025 H}{n}$$

$$H = \frac{T_L \bar{\omega} (60/2\pi)}{63\,025} = \frac{1560(121.11)(60/2\pi)}{63\,025} = 28.6 \text{ hp}$$

The gear train has to be sized for 28.6 hp under shock conditions since the flywheel is on the motor shaft. From Table A-18,

$$I = \frac{m}{8} (d_o^2 + d_i^2) = \frac{W}{8g} (d_o^2 + d_i^2)$$

$$W = \frac{8gI}{d_o^2 + d_i^2} = \frac{8(386)(110.72)}{d_o^2 + d_i^2}$$

If a mean diameter of the flywheel rim of 30 in is acceptable, try a rim thickness of 4 in

$$d_i = 30 - (4/2) = 28 \text{ in}$$

$$d_o = 30 + (4/2) = 32 \text{ in}$$

$$W = \frac{8(386)(110.72)}{32^2 + 28^2} = 189.1 \text{ lb}$$

Rim volume V is given by

$$V = \frac{\pi l}{4} (d_o^2 - d_i^2) = \frac{\pi l}{4} (32^2 - 28^2) = 188.5l$$

where l is the rim width as shown in Table A-18. The specific weight of cast iron is $\gamma = 0.260 \text{ lbf} \cdot \text{in}^3$, therefore the volume of cast iron is

$$V = \frac{W}{\gamma} = \frac{189.1}{0.260} = 727.3 \text{ in}^3$$

Thus

$$188.5l = 727.3$$

$$l = \frac{727.3}{188.5} = 3.86 \text{ in wide}$$

Proportions can be varied.

16-30 Prob. 16-29 solution has I for the motor shaft flywheel as

$$I = 110.72 \text{ in} \cdot \text{lbf} \cdot \text{s}^2/\text{rad}$$

A flywheel located on the crank shaft needs an inertia of $10^2 I$ (Prob. 16-26, rule 2)

$$I = 10^2(110.72) = 11\,072 \text{ in} \cdot \text{lbf} \cdot \text{s}^2/\text{rad}$$

A 100-fold inertia increase. On the other hand, the gear train has to transmit 3 hp under shock conditions.

Stating the problem is most of the solution. Satisfy yourself that on the crankshaft:

$$T_L = 1300(12) = 15\,600 \text{ lbf} \cdot \text{in}$$

$$T_r = 10(168.07) = 1680.7 \text{ lbf} \cdot \text{in}$$

$$\omega_r = 117.81/10 = 11.781 \text{ rad/s}$$

$$\omega_s = 125.66/10 = 12.566 \text{ rad/s}$$

$$a = -21.41(100) = -2141$$

$$b = 2690.35(10) = 26903.5$$

$$T_M = -2141\omega_c + 26\,903.5 \text{ lbf} \cdot \text{in}$$

$$T_2 = 1680.6 \left(\frac{15\,600 - 1680.5}{15\,600 - T_2} \right)^{19}$$

The root is $10(26.67) = 266.7 \text{ lbf} \cdot \text{in}$

$$\bar{\omega} = 121.11/10 = 12.111 \text{ rad/s}$$

$$C_s = 0.0549 \text{ (same)}$$

$$\omega_{\max} = 121.11/10 = 12.111 \text{ rad/s Ans.}$$

$$\omega_{\min} = 117.81/10 = 11.781 \text{ rad/s Ans.}$$

E_1 , E_2 , ΔE and peak power are the same.

From Table A-18

$$W = \frac{8gI}{d_o^2 + d_i^2} = \frac{8(386)(11\,072)}{d_o^2 + d_i^2}$$

Scaling will affect d_o and d_i , but the gear ratio changed I . Scale up the flywheel in the Prob. 16-29 solution by a factor of 2.5. Thickness becomes $4(2.5) = 10$ in.

$$\bar{d} = 30(2.5) = 75 \text{ in}$$

$$d_o = 75 + (10/2) = 80 \text{ in}$$

$$d_i = 75 - (10/2) = 70 \text{ in}$$

$$W = \frac{8(386)(11\,072)}{80^2 + 70^2} = 3026 \text{ lbf}$$

$$v = \frac{3026}{0.26} = 11\,638 \text{ in}^3$$

$$V = \frac{\pi}{4}l(80^2 - 70^2) = 1178l$$

$$l = \frac{11\,638}{1178} = 9.88 \text{ in}$$

Proportions can be varied. The weight has increased $3026/189.1$ or about 16-fold while the moment of inertia I increased 100-fold. The gear train transmits a steady 3 hp. But the motor armature has its inertia magnified 100-fold, and during the punch there are deceleration stresses in the train. With no motor armature information, we cannot comment.

16-31 This can be the basis for a class discussion.

Chapter 17

17-1 Given: F-1 Polyamide, $b = 6$ in, $d = 2$ in @ 1750 rev/min

$$C = 9(12) = 108 \text{ in, vel. ratio } 0.5, H_{\text{nom}} = 2 \text{ hp, } K_s = 1.25, n_d = 1$$

Table 17-2: $t = 0.05$ in, $d_{\text{min}} = 1.0$ in, $F_a = 35$ lbf/in,

$$\gamma = 0.035 \text{ lbf/in}^3, f = 0.5$$

Table 17-4: $C_p = 0.70$

$$w = 12\gamma bt = 12(0.035)(6)(0.05) = 0.126 \text{ lbf/ft}$$

$$\theta_d = 3.123 \text{ rad, } \exp(f\theta) = 4.766 \text{ (perhaps)}$$

$$V = \frac{\pi dn}{12} = \frac{\pi(2)(1750)}{12} = 916.3 \text{ ft/min}$$

(a) Eq. (e), p. 865: $F_c = \frac{w}{32.17} \left(\frac{V}{60}\right)^2 = \frac{0.126}{32.17} \left(\frac{916.3}{60}\right)^2 = 0.913 \text{ lbf Ans.}$

$$T = \frac{63\,025 H_{\text{nom}} K_s n_d}{n} = \frac{63\,025(2)(1.25)(1)}{1750} = 90.0 \text{ lbf} \cdot \text{in}$$

$$\Delta F = \frac{2T}{d} = \frac{2(90)}{2} = 90 \text{ lbf}$$

Eq. (17-12): $(F_1)_a = bF_a C_p C_v = 6(35)(0.70)(1) = 147 \text{ lbf Ans.}$

$$F_2 = F_{1a} - \Delta F = 147 - 90 = 57 \text{ lbf Ans.}$$

Do not use Eq. (17-9) because we do not yet know f' .

Eq. (i), p. 866: $F_i = \frac{F_{1a} + F_2}{2} - F_c = \frac{147 + 57}{2} - 0.913 = 101.1 \text{ lbf Ans.}$

Eq. (17-7): $f' = \frac{1}{\theta_d} \ln \left[\frac{(F_1)_a - F_c}{F_2 - F_c} \right] = \frac{1}{3.123} \ln \left(\frac{147 - 0.913}{57 - 0.913} \right) = 0.307$

The friction is thus undeveloped.

(b) The transmitted horsepower is,

$$H = \frac{(\Delta F)V}{33\,000} = \frac{90(916.3)}{33\,000} = 2.5 \text{ hp Ans.}$$

$$n_{fs} = \frac{H}{H_{\text{nom}} K_s} = \frac{2.5}{2(1.25)} = 1$$

From Eq. (17-2), $L = 225.3$ in *Ans.*

(c) From Eq. (17-13), $\text{dip} = \frac{3C^2 w}{2F_i}$

where C is the center-to-center distance in feet.

$$\text{dip} = \frac{3(108/12)^2(0.126)}{2(101.1)} = 0.151 \text{ in Ans.}$$

Comment: The friction is under-developed. Narrowing the belt width to 5 in (if size is available) will increase f' . The limit of narrowing is $b_{\min} = 4.680$ in, whence

$$\begin{aligned} w &= 0.0983 \text{ lbf/ft} & (F_1)_a &= 114.7 \text{ lbf} \\ F_c &= 0.712 \text{ lbf} & F_2 &= 24.6 \text{ lbf} \\ T &= 90 \text{ lbf} \cdot \text{in} \quad (\text{same}) & f' &= f = 0.50 \\ \Delta F &= (F_1)_a - F_2 = 90 \text{ lbf} & \text{dip} &= 0.173 \text{ in} \\ F_i &= 68.9 \text{ lbf} \end{aligned}$$

Longer life can be obtained with a 6-inch wide belt by reducing F_i to attain $f' = 0.50$. Prob. 17-8 develops an equation we can use here

$$\begin{aligned} F_i &= \frac{(\Delta F + F_c) \exp(f\theta) - F_c}{\exp(f\theta) - 1} \\ F_2 &= F_1 - \Delta F \\ F_i &= \frac{F_1 + F_2}{2} - F_c \\ f' &= \frac{1}{\theta_d} \ln \left(\frac{F_1 - F_c}{F_2 - F_c} \right) \\ \text{dip} &= \frac{3(CD/12)^2 w}{2F_i} \end{aligned}$$

which in this case gives

$$\begin{aligned} F_1 &= 114.9 \text{ lbf} & F_c &= 0.913 \text{ lbf} \\ F_2 &= 24.8 \text{ lbf} & f' &= 0.50 \\ F_i &= 68.9 \text{ lbf} & \text{dip} &= 0.222 \text{ in} \end{aligned}$$

So, reducing F_i from 101.1 lbf to 68.9 lbf will bring the undeveloped friction up to 0.50, with a corresponding dip of 0.222 in. Having reduced F_1 and F_2 , the endurance of the belt is improved. Power, service factor and design factor have remained in tack.

17-2 There are practical limitations on doubling the iconic scale. We can double pulley diameters and the center-to-center distance. With the belt we could:

- Use the same A-3 belt and double its width;
- Change the belt to A-5 which has a thickness 0.25 in rather than $2(0.13) = 0.26$ in, and an increased F_a ;
- Double the thickness and double tabulated F_a which is based on table thickness.

The object of the problem is to reveal where the non-proportionalities occur and the nature of scaling a flat belt drive.

We will utilize the third alternative, choosing an A-3 polyamide belt of double thickness, assuming it is available. We will also remember to double the tabulated F_a from 100 lbf/in to 200 lbf/in.

In assigning this problem, you could outline (or solicit) the three alternatives just mentioned and assign the one of your choice—alternative 3:

Ex. 17-2: $b = 10$ in, $d = 16$ in, $D = 32$ in, Polyamide A-3, $t = 0.13$ in, $\gamma = 0.042$, $F_a = 100$ lbf/in, $C_p = 0.94$, $C_v = 1$, $f = 0.8$

$$T = \frac{63\,025(60)(1.15)(1.05)}{860} = 5313 \text{ lbf} \cdot \text{in}$$

$$w = 12\gamma bt = 12(0.042)(10)(0.13) = 0.655 \text{ lbf/ft}$$

$$V = \pi dn/12 = \pi(16)(860/12) = 3602 \text{ ft/min}$$

$$\theta_d = 3.037 \text{ rad}$$

For fully-developed friction:

$$\exp(f\theta_d) = [0.8(3.037)] = 11.35$$

$$F_c = \frac{wV^2}{g} = \frac{0.655(3602/60)^2}{32.174} = 73.4 \text{ lbf}$$

$$(F_1)_a = F_1 = bF_a C_p C_v = 10(100)(0.94)(1) = 940 \text{ lbf}$$

$$\Delta F = 2T/D = 2(5313)/(16) = 664 \text{ lbf}$$

$$F_2 = F_1 - \Delta F = 940 - 664 = 276 \text{ lbf}$$

$$F_i = \frac{F_1 + F_2}{2} - F_c = \frac{940 + 276}{2} - 73.4 = 535 \text{ lbf}$$

Transmitted power H (or H_a):

$$H = \frac{\Delta F(V)}{33\,000} = \frac{664(3602)}{33\,000} = 72.5 \text{ hp}$$

$$f' = \frac{1}{\theta_d} \ln \left(\frac{F_1 - F_c}{F_2 - F_c} \right) = \frac{1}{3.037} \ln \left(\frac{940 - 73.4}{276 - 73.4} \right) = 0.479 \text{ undeveloped}$$

Note, in this as well as in the double-size case, $\exp(f\theta_d)$ is not used. It will show up if we relax F_i (and change other parameters to transmit the required power), in order to bring f' up to $f = 0.80$, and increase belt life.

You may wish to suggest to your students that solving comparison problems in this manner assists in the design process.

Doubled: $b = 20$ in, $d = 32$ in, $D = 72$ in, Polyamide A-3, $t = 0.26$ in, $\gamma = 0.042$, $F_a = 2(100) = 200$ lbf/in, $C_p = 1$, $C_v = 1$, $f = 0.8$

$$T = 4(5313) = 21\,252 \text{ lbf} \cdot \text{in}$$

$$w = 12(0.042)(20)(0.26) = 2.62 \text{ lbf/ft}$$

$$V = \pi(32)(860/12) = 7205 \text{ ft/min}$$

$$\theta = 3.037 \text{ rad}$$

For fully-developed friction:

$$\exp(f\theta_d) = \exp[0.8(3.037)] = 11.35$$

$$F_c = \frac{wV^2}{g} = \frac{0.262(7205/60)^2}{32.174} = 1174.3 \text{ lbf}$$

$$(F_1)_a = 20(200)(1)(1) = 4000 \text{ lbf} = F_1$$

$$\Delta F = 2T/D = 2(21\,252)/(32) = 1328.3 \text{ lbf}$$

$$F_2 = F_1 - \Delta F = 4000 - 1328.3 = 2671.7 \text{ lbf}$$

$$F_i = \frac{F_1 + F_2}{2} - F_c = \frac{4000 + 2671.7}{2} - 1174.3 = 2161.6 \text{ lbf}$$

Transmitted power H :

$$H = \frac{\Delta F(V)}{33\,000} = \frac{1328.3(7205)}{33\,000} = 290 \text{ hp}$$

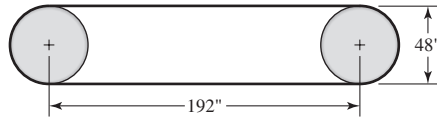
$$f' = \frac{1}{\theta_d} \ln \left(\frac{F_1 - F_c}{F_2 - F_c} \right) = \frac{1}{3.037} \ln \left(\frac{4000 - 1174.3}{2671.7 - 1174.3} \right) = 0.209 \text{ undeveloped}$$

There was a small change in C_p .

Parameter	Change	Parameter	Change
V	2-fold	ΔF	2-fold
F_c	16-fold	F_i	4-fold
F_1	4.26-fold	H_t	4-fold
F_2	9.7-fold	f'	0.48-fold

Note the change in F_c !

17-3



As a design task, the decision set on p. 873 is useful.

A priori decisions:

- Function: $H_{\text{nom}} = 60$ hp, $n = 380$ rev/min, $C = 192$ in, $K_s = 1.1$
- Design factor: $n_d = 1$
- Initial tension: Catenary
- Belt material: Polyamide A-3, $F_a = 100$ lbf/in, $\gamma = 0.042$ lbf/in³, $f = 0.8$
- Drive geometry: $d = D = 48$ in
- Belt thickness: $t = 0.13$ in

Design variable: Belt width of 6 in

Use a method of trials. Initially choose $b = 6$ in

$$V = \frac{\pi dn}{12} = \frac{\pi(48)(380)}{12} = 4775 \text{ ft/min}$$

$$w = 12\gamma bt = 12(0.042)(6)(0.13) = 0.393 \text{ lbf/ft}$$

$$F_c = \frac{wV^2}{g} = \frac{0.393(4775/60)^2}{32.174} = 77.4 \text{ lbf}$$

$$T = \frac{63\,025 H_{\text{nom}} K_s n_d}{n} = \frac{63\,025(60)(1.1)(1)}{380} = 10\,946 \text{ lbf} \cdot \text{in}$$

$$\Delta F = \frac{2T}{d} = \frac{2(10\,946)}{48} = 456.1 \text{ lbf}$$

$$F_1 = (F_1)_a = bF_a C_p C_v = 6(100)(1)(1) = 600 \text{ lbf}$$

$$F_2 = F_1 - \Delta F = 600 - 456.1 = 143.9 \text{ lbf}$$

Transmitted power H

$$H = \frac{\Delta F(V)}{33\,000} = \frac{456.1(4775)}{33\,000} = 66 \text{ hp}$$

$$F_i = \frac{F_1 + F_2}{2} - F_c = \frac{600 + 143.9}{2} - 77.4 = 294.6 \text{ lbf}$$

$$f' = \frac{1}{\theta_d} \ln \left(\frac{F_1 - F_c}{F_2 - F_c} \right) = \frac{1}{\pi} \ln \left(\frac{600 - 77.4}{143.9 - 77.4} \right) = 0.656$$

$$\text{Eq. (17-2): } L = [4(192)^2 - (48 - 48)^2]^{1/2} + 0.5[48(\pi) + 48(\pi)] = 534.8 \text{ in}$$

Friction is not fully developed, so b_{min} is just a little smaller than 6 in (5.7 in). Not having a figure of merit, we choose the most narrow belt available (6 in). We can improve the

design by reducing the initial tension, which reduces F_1 and F_2 , thereby increasing belt life. This will bring f' to 0.80

$$F_1 = \frac{(\Delta F + F_c) \exp(f\theta) - F_c}{\exp(f\theta) - 1}$$

$$\exp(f\theta) = \exp(0.80\pi) = 12.345$$

Therefore

$$F_1 = \frac{(456.1 + 77.4)(12.345) - 77.4}{12.345 - 1} = 573.7 \text{ lbf}$$

$$F_2 = F_1 - \Delta F = 573.7 - 456.1 = 117.6 \text{ lbf}$$

$$F_i = \frac{F_1 + F_2}{2} - F_c = \frac{573.7 + 117.6}{2} - 77.4 = 268.3 \text{ lbf}$$

These are small reductions since f' is close to f , but improvements nevertheless.

$$\text{dip} = \frac{3C^2w}{2F_i} = \frac{3(192/12)^2(0.393)}{2(268.3)} = 0.562 \text{ in}$$

17-4 From the last equation given in the Problem Statement,

$$\exp(f\phi) = \frac{1}{1 - \{2T/[d(a_0 - a_2)b]\}}$$

$$\left[1 - \frac{2T}{d(a_0 - a_2)b}\right] \exp(f\phi) = 1$$

$$\left[\frac{2T}{d(a_0 - a_2)b}\right] \exp(f\phi) = \exp(f\phi) - 1$$

$$b = \frac{1}{a_0 - a_2} \left(\frac{2T}{d}\right) \left[\frac{\exp(f\phi)}{\exp(f\phi) - 1}\right]$$

But $2T/d = 33\,000H_d/V$

Thus,

$$b = \frac{1}{a_0 - a_2} \left(\frac{33\,000H_d}{V}\right) \left[\frac{\exp(f\phi)}{\exp(f\phi) - 1}\right] \quad Q.E.D.$$

17-5 Refer to Ex. 17-1 on p. 870 for the values used below.

(a) The maximum torque prior to slip is,

$$T = \frac{63\,025 H_{\text{nom}} K_s n_d}{n} = \frac{63\,025(15)(1.25)(1.1)}{1750} = 742.8 \text{ lbf} \cdot \text{in} \quad \text{Ans.}$$

The corresponding initial tension is,

$$F_i = \frac{T}{D} \left(\frac{\exp(f\theta) + 1}{\exp(f\theta) - 1}\right) = \frac{742.8}{6} \left(\frac{11.17 + 1}{11.17 - 1}\right) = 148.1 \text{ lbf} \quad \text{Ans.}$$

(b) See Prob. 17-4 statement. The final relation can be written

$$\begin{aligned}
 b_{\min} &= \frac{1}{F_a C_p C_v - (12\gamma t / 32.174)(V/60)^2} \left\{ \frac{33\,000 H_a \exp(f\theta)}{V[\exp(f\theta) - 1]} \right\} \\
 &= \frac{1}{100(0.7)(1) - \{[12(0.042)(0.13)]/32.174\}(2749/60)^2} \left[\frac{33\,000(20.6)(11.17)}{2749(11.17 - 1)} \right] \\
 &= 4.13 \text{ in } \textit{Ans.}
 \end{aligned}$$

This is the minimum belt width since the belt is at the point of slip. The design must round up to an available width.

Eq. (17-1):

$$\begin{aligned}
 \theta_d &= \pi - 2 \sin^{-1} \left(\frac{D - d}{2C} \right) = \pi - 2 \sin^{-1} \left[\frac{18 - 6}{2(96)} \right] \\
 &= 3.016\,511 \text{ rad} \\
 \theta_D &= \pi + 2 \sin^{-1} \left(\frac{D - d}{2C} \right) = \pi + 2 \sin^{-1} \left[\frac{18 - 6}{2(96)} \right] \\
 &= 3.266\,674
 \end{aligned}$$

Eq. (17-2):

$$\begin{aligned}
 L &= [4(96)^2 - (18 - 6)^2]^{1/2} + \frac{1}{2}[18(3.266\,674) + 6(3.016\,511)] \\
 &= 230.074 \text{ in } \textit{Ans.}
 \end{aligned}$$

(c)
$$\Delta F = \frac{2T}{d} = \frac{2(742.8)}{6} = 247.6 \text{ lbf}$$

$$(F_1)_a = b F_a C_p C_v = F_1 = 4.13(100)(0.70)(1) = 289.1 \text{ lbf}$$

$$F_2 = F_1 - \Delta F = 289.1 - 247.6 = 41.5 \text{ lbf}$$

$$F_c = 25.6 \left(\frac{0.271}{0.393} \right) = 17.7 \text{ lbf}$$

$$F_i = \frac{F_1 + F_2}{2} - F_c = \frac{289.1 + 41.5}{2} - 17.7 = 147.6 \text{ lbf}$$

Transmitted belt power H

$$H = \frac{\Delta F(V)}{33\,000} = \frac{247.6(2749)}{33\,000} = 20.6 \text{ hp}$$

$$n_{fs} = \frac{H}{H_{\text{nom}} K_s} = \frac{20.6}{15(1.25)} = 1.1$$

If you only change the belt width, the parameters in the following table change as shown.

	Ex. 17-1	This Problem
b	6.00	4.13
w	0.393	0.271
F_c	25.6	17.6
$(F_1)_a$	420	289
F_2	172.4	42
F_i	270.6	147.7
f'	0.33*	0.80**
dip	0.139	0.176

*Friction underdeveloped
 **Friction fully developed

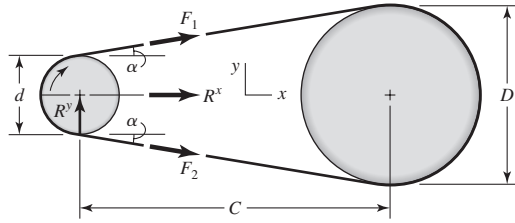
17-6 The transmitted power is the same.

	$b = 6$ in	$b = 12$ in	n -Fold Change
F_c	25.65	51.3	2
F_i	270.35	664.9	2.46
$(F_1)_a$	420	840	2
F_2	172.4	592.4	3.44
H_a	20.62	20.62	1
n_{fs}	1.1	1.1	1
f'	0.139	0.125	0.90
dip	0.328	0.114	0.34

If we relax F_i to develop full friction ($f = 0.80$) and obtain longer life, then

	$b = 6$ in	$b = 12$ in	n -Fold Change
F_c	25.6	51.3	2
F_i	148.1	148.1	1
F_1	297.6	323.2	1.09
F_2	50	75.6	1.51
f'	0.80	0.80	1
dip	0.255	0.503	2

17-7



Find the resultant of F_1 and F_2 :

$$\alpha = \sin^{-1} \frac{D - d}{2C}$$

$$\sin \alpha = \frac{D - d}{2C}$$

$$\cos \alpha = 1 - \frac{1}{2} \left(\frac{D - d}{2C} \right)^2$$

$$R^x = F_1 \cos \alpha + F_2 \cos \alpha = (F_1 + F_2) \left[1 - \frac{1}{2} \left(\frac{D - d}{2C} \right)^2 \right] \quad \text{Ans.}$$

$$R^y = F_1 \sin \alpha - F_2 \sin \alpha = (F_1 - F_2) \frac{D - d}{2C} \quad \text{Ans.}$$

From Ex. 17-2, $d = 16$ in, $D = 36$ in, $C = 16(12) = 192$ in, $F_1 = 940$ lbf, $F_2 = 276$ lbf

$$\alpha = \sin^{-1} \left[\frac{36 - 16}{2(192)} \right] = 2.9855^\circ$$

$$R^x = (940 + 276) \left[1 - \frac{1}{2} \left(\frac{36 - 16}{2(192)} \right)^2 \right] = 1214.4 \text{ lbf}$$

$$R^y = (940 - 276) \left[\frac{36 - 16}{2(192)} \right] = 34.6 \text{ lbf}$$

$$T = (F_1 - F_2) \left(\frac{d}{2} \right) = (940 - 276) \left(\frac{16}{2} \right) = 5312 \text{ lbf} \cdot \text{in}$$

17-8 Begin with Eq. (17-10),

$$F_1 = F_c + F_i \frac{2 \exp(f\theta)}{\exp(f\theta) - 1}$$

Introduce Eq. (17-9):

$$F_1 = F_c + \frac{T}{D} \left[\frac{\exp(f\theta) + 1}{\exp(f\theta) - 1} \right] \left[\frac{2 \exp(f\theta)}{\exp(f\theta) + 1} \right] = F_c + \frac{2T}{D} \left[\frac{\exp(f\theta)}{\exp(f\theta) - 1} \right]$$

$$F_1 = F_c + \Delta F \left[\frac{\exp(f\theta)}{\exp(f\theta) - 1} \right]$$

Now add and subtract $F_c \left[\frac{\exp(f\theta)}{\exp(f\theta) - 1} \right]$

$$F_1 = F_c + F_c \left[\frac{\exp(f\theta)}{\exp(f\theta) - 1} \right] + \Delta F \left[\frac{\exp(f\theta)}{\exp(f\theta) - 1} \right] - F_c \left[\frac{\exp(f\theta)}{\exp(f\theta) - 1} \right]$$

$$F_1 = (F_c + \Delta F) \left[\frac{\exp(f\theta)}{\exp(f\theta) - 1} \right] + F_c - F_c \left[\frac{\exp(f\theta)}{\exp(f\theta) - 1} \right]$$

$$F_1 = (F_c + \Delta F) \left[\frac{\exp(f\theta)}{\exp(f\theta) - 1} \right] - \frac{F_c}{\exp(f\theta) - 1}$$

$$F_1 = \frac{(F_c + \Delta F) \exp(f\theta) - F_c}{\exp(f\theta) - 1} \quad Q.E.D.$$

From Ex. 17-2: $\theta_d = 3.037$ rad, $\Delta F = 664$ lbf, $\exp(f\theta) = \exp[0.80(3.037)] = 11.35$, and $F_c = 73.4$ lbf.

$$F_1 = \frac{(73.4 + 664)(11.35 - 73.4)}{(11.35 - 1)} = 802 \text{ lbf}$$

$$F_2 = F_1 - \Delta F = 802 - 664 = 138 \text{ lbf}$$

$$F_i = \frac{802 + 138}{2} - 73.4 = 396.6 \text{ lbf}$$

$$f' = \frac{1}{\theta_d} \ln \left(\frac{F_1 - F_c}{F_2 - F_c} \right) = \frac{1}{3.037} \ln \left(\frac{802 - 73.4}{138 - 73.4} \right) = 0.80 \quad \text{Ans.}$$

17-9 This is a good class project. Form four groups, each with a belt to design. Once each group agrees internally, all four should report their designs including the forces and torques on the line shaft. If you give them the pulley locations, they could design the line shaft.

17-10 If you have the students implement a computer program, the design problem selections may differ, and the students will be able to explore them. For $K_s = 1.25$, $n_d = 1.1$, $d = 14$ in and $D = 28$ in, a polyamide A-5 belt, 8 inches wide, will do ($b_{\min} = 6.58$ in)

17-11 An efficiency of less than unity lowers the output for a given input. Since the object of the drive is the output, the efficiency must be incorporated such that the belt's capacity is increased. The design power would thus be expressed as

$$H_d = \frac{H_{\text{nom}} K_s n_d}{\text{eff}} \quad \text{Ans.}$$

17-12 Some perspective on the size of F_c can be obtained from

$$F_c = \frac{w}{g} \left(\frac{V}{60} \right)^2 = \frac{12\gamma b t}{g} \left(\frac{V}{60} \right)^2$$

An approximate comparison of non-metal and metal belts is presented in the table below.

	Non-metal	Metal
γ , lbf/in ³	0.04	0.280
b , in	5.00	1.000
t , in	0.20	0.005

The ratio w/w_m is

$$\frac{w}{w_m} = \frac{12(0.04)(5)(0.2)}{12(0.28)(1)(0.005)} \doteq 29$$

The second contribution to F_c is the belt peripheral velocity which tends to be low in metal belts used in instrument, printer, plotter and similar drives. The velocity ratio squared influences any $F_c/(F_c)_m$ ratio.

It is common for engineers to treat F_c as negligible compared to other tensions in the belting problem. However, when developing a computer code, one should include F_c .

17-13 Eq. (17-8):

$$\Delta F = F_1 - F_2 = (F_1 - F_c) \frac{\exp(f\theta) - 1}{\exp(f\theta)}$$

Assuming negligible centrifugal force and setting $F_1 = ab$ from step 3,

$$b_{\min} = \frac{\Delta F}{a} \left[\frac{\exp(f\theta)}{\exp(f\theta) - 1} \right] \quad (1)$$

Also,
$$H_d = H_{\text{nom}} K_s n_d = \frac{(\Delta F)V}{33\,000}$$

$$\Delta F = \frac{33\,000 H_{\text{nom}} K_s n_d}{V}$$

Substituting into (1),
$$b_{\min} = \frac{1}{a} \left(\frac{33\,000 H_d}{V} \right) \frac{\exp(f\theta)}{\exp(f\theta) - 1} \quad \text{Ans.}$$

17-14 The decision set for the friction metal flat-belt drive is:

A priori decisions

- Function: $H_{\text{nom}} = 1$ hp, $n = 1750$ rev/min, $VR = 2$, $C \doteq 15$ in, $K_s = 1.2$, $N_p = 10^6$ belt passes.
- Design factor: $n_d = 1.05$
- Belt material and properties: 301/302 stainless steel
Table 17-8: $S_y = 175\,000$ psi, $E = 28$ Mpsi, $\nu = 0.285$

- Drive geometry: $d = 2$ in, $D = 4$ in
- Belt thickness: $t = 0.003$ in

Design variables:

- Belt width b
- Belt loop periphery

Preliminaries

$$H_d = H_{\text{nom}} K_s n_d = 1(1.2)(1.05) = 1.26 \text{ hp}$$

$$T = \frac{63\,025(1.26)}{1750} = 45.38 \text{ lbf} \cdot \text{in}$$

A 15 in center-to-center distance corresponds to a belt loop periphery of 39.5 in. The 40 in loop available corresponds to a 15.254 in center distance.

$$\theta_d = \pi - 2 \sin^{-1} \left[\frac{4 - 2}{2(15.254)} \right] = 3.010 \text{ rad}$$

$$\theta_D = \pi + 2 \sin^{-1} \left[\frac{4 - 2}{2(15.274)} \right] = 3.273 \text{ rad}$$

For full friction development

$$\exp(f\theta_d) = \exp[0.35(3.010)] = 2.868$$

$$V = \frac{\pi d n}{12} = \frac{\pi(2)(1750)}{12} = 916.3 \text{ ft/s}$$

$$S_y = 175\,000 \text{ psi}$$

Eq. (17-15):

$$S_f = 14.17(10^6)(10^6)^{-0.407} = 51\,212 \text{ psi}$$

From selection step 3

$$a = \left[S_f - \frac{Et}{(1 - \nu^2)d} \right] t = \left[51\,212 - \frac{28(10^6)(0.003)}{(1 - 0.285^2)(2)} \right] (0.003)$$

$$= 16.50 \text{ lbf/in of belt width}$$

$$(F_1)_a = ab = 16.50b$$

For full friction development, from Prob. 17-13,

$$b_{\text{min}} = \frac{\Delta F}{a} \frac{\exp(f\theta_d)}{\exp(f\theta_d) - 1}$$

$$\Delta F = \frac{2T}{d} = \frac{2(45.38)}{2} = 45.38 \text{ lbf}$$

So

$$b_{\text{min}} = \frac{45.38}{16.50} \left(\frac{2.868}{2.868 - 1} \right) = 4.23 \text{ in}$$

Decision #1: $b = 4.5$ in

$$F_1 = (F_1)_a = ab = 16.5(4.5) = 74.25 \text{ lbf}$$

$$F_2 = F_1 - \Delta F = 74.25 - 45.38 = 28.87 \text{ lbf}$$

$$F_i = \frac{F_1 + F_2}{2} = \frac{74.25 + 28.87}{2} = 51.56 \text{ lbf}$$

Existing friction

$$f' = \frac{1}{\theta_d} \ln \left(\frac{F_1}{F_2} \right) = \frac{1}{3.010} \ln \left(\frac{74.25}{28.87} \right) = 0.314$$

$$H_t = \frac{(\Delta F)V}{33\,000} = \frac{45.38(916.3)}{33\,000} = 1.26 \text{ hp}$$

$$n_{fs} = \frac{H_t}{H_{\text{nom}} K_s} = \frac{1.26}{1(1.2)} = 1.05$$

This is a non-trivial point. The methodology preserved the factor of safety corresponding to $n_d = 1.1$ even as we rounded b_{min} up to b .

Decision #2 was taken care of with the adjustment of the center-to-center distance to accommodate the belt loop. Use Eq. (17-2) as is and solve for C to assist in this. Remember to subsequently recalculate θ_d and θ_D .

17-15 Decision set:

A priori decisions

- Function: $H_{\text{nom}} = 5$ hp, $N = 1125$ rev/min, $VR = 3$, $C \doteq 20$ in, $K_s = 1.25$,
 $N_p = 10^6$ belt passes
- Design factor: $n_d = 1.1$
- Belt material: BeCu, $S_y = 170\,000$ psi, $E = 17(10^6)$ psi, $\nu = 0.220$
- Belt geometry: $d = 3$ in, $D = 9$ in
- Belt thickness: $t = 0.003$ in

Design decisions

- Belt loop periphery
- Belt width b

Preliminaries:

$$H_d = H_{\text{nom}} K_s n_d = 5(1.25)(1.1) = 6.875 \text{ hp}$$

$$T = \frac{63\,025(6.875)}{1125} = 385.2 \text{ lbf} \cdot \text{in}$$

Decision #1: Choose a 60-in belt loop with a center-to-center distance of 20.3 in.

$$\theta_d = \pi - 2 \sin^{-1} \left[\frac{9 - 3}{2(20.3)} \right] = 2.845 \text{ rad}$$

$$\theta_D = \pi + 2 \sin^{-1} \left[\frac{9 - 3}{2(20.3)} \right] = 3.438 \text{ rad}$$

For full friction development:

$$\exp(f\theta_d) = \exp[0.32(2.845)] = 2.485$$

$$V = \frac{\pi dn}{12} = \frac{\pi(3)(1125)}{12} = 883.6 \text{ ft/min}$$

$$S_f = 56\,670 \text{ psi}$$

From selection step 3

$$a = \left[S_f - \frac{Et}{(1-\nu^2)d} \right] t = \left[56\,670 - \frac{17(10^6)(0.003)}{(1-0.22^2)(3)} \right] (0.003) = 116.4 \text{ lbf/in}$$

$$\Delta F = \frac{2T}{d} = \frac{2(385.2)}{3} = 256.8 \text{ lbf}$$

$$b_{\min} = \frac{\Delta F}{a} \left[\frac{\exp(f\theta_d)}{\exp(f\theta_d) - 1} \right] = \frac{256.8}{116.4} \left(\frac{2.485}{2.485 - 1} \right) = 3.69 \text{ in}$$

Decision #2: $b = 4 \text{ in}$

$$F_1 = (F_1)_a = ab = 116.4(4) = 465.6 \text{ lbf}$$

$$F_2 = F_1 - \Delta F = 465.6 - 256.8 = 208.8 \text{ lbf}$$

$$F_i = \frac{F_1 + F_2}{2} = \frac{465.6 + 208.8}{2} = 337.3 \text{ lbf}$$

Existing friction

$$f' = \frac{1}{\theta_d} \ln \left(\frac{F_1}{F_2} \right) = \frac{1}{2.845} \ln \left(\frac{465.6}{208.8} \right) = 0.282$$

$$H = \frac{(\Delta F)V}{33\,000} = \frac{256.8(883.6)}{33\,000} = 6.88 \text{ hp}$$

$$n_{fs} = \frac{H}{5(1.25)} = \frac{6.88}{5(1.25)} = 1.1$$

F_i can be reduced only to the point at which $f' = f = 0.32$. From Eq. (17-9)

$$F_i = \frac{T}{d} \left[\frac{\exp(f\theta_d) + 1}{\exp(f\theta_d) - 1} \right] = \frac{385.2}{3} \left(\frac{2.485 + 1}{2.485 - 1} \right) = 301.3 \text{ lbf}$$

Eq. (17-10):

$$F_1 = F_i \left[\frac{2 \exp(f\theta_d)}{\exp(f\theta_d) + 1} \right] = 301.3 \left[\frac{2(2.485)}{2.485 + 1} \right] = 429.7 \text{ lbf}$$

$$F_2 = F_1 - \Delta F = 429.7 - 256.8 = 172.9 \text{ lbf}$$

and $f' = f = 0.32$

17-16 This solution is the result of a series of five design tasks involving different belt thicknesses. The results are to be compared as a matter of perspective. These design tasks are accomplished in the same manner as in Probs. 17-14 and 17-15 solutions.

The details will not be presented here, but the table is provided as a means of learning. Five groups of students could each be assigned a belt thickness. You can form a table from their results or use the table below

	<i>t</i> , in				
	0.002	0.003	0.005	0.008	0.010
<i>b</i>	4.000	3.500	4.000	1.500	1.500
<i>CD</i>	20.300	20.300	20.300	18.700	20.200
<i>a</i>	109.700	131.900	110.900	194.900	221.800
<i>d</i>	3.000	3.000	3.000	5.000	6.000
<i>D</i>	9.000	9.000	9.000	15.000	18.000
<i>F_i</i>	310.600	333.300	315.200	215.300	268.500
<i>F₁</i>	439.000	461.700	443.600	292.300	332.700
<i>F₂</i>	182.200	209.000	186.800	138.200	204.300
<i>n_{fs}</i>	1.100	1.100	1.100	1.100	1.100
<i>L</i>	60.000	60.000	60.000	70.000	80.000
<i>f'</i>	0.309	0.285	0.304	0.288	0.192
<i>F_i</i>	301.200	301.200	301.200	195.700	166.600
<i>F₁</i>	429.600	429.600	429.600	272.700	230.800
<i>F₂</i>	172.800	172.800	172.800	118.700	102.400
<i>f</i>	0.320	0.320	0.320	0.320	0.320

The first three thicknesses result in the same adjusted F_i , F_1 and F_2 (why?). We have no figure of merit, but the costs of the belt and the pulleys is about the same for these three thicknesses. Since the same power is transmitted and the belts are widening, belt forces are lessening.

17-17 This is a design task. The decision variables would be belt length and belt section, which could be combined into one, such as B90. The number of belts is not an issue.

We have no figure of merit, which is not practical in a text for this application. I suggest you gather sheave dimensions and costs and V-belt costs from a principal vendor and construct a figure of merit based on the costs. Here is one trial.

Preliminaries: For a single V-belt drive with $H_{\text{nom}} = 3$ hp, $n = 3100$ rev/min, $D = 12$ in, and $d = 6.2$ in, choose a B90 belt, $K_s = 1.3$ and $n_d = 1$.

$$L_p = 90 + 1.8 = 91.8 \text{ in}$$

Eq. (17-16b):

$$C = 0.25 \left\{ \left[91.8 - \frac{\pi}{2}(12 + 6.2) \right] + \sqrt{\left[91.8 - \frac{\pi}{2}(12 + 6.2) \right]^2 - 2(12 - 6.2)^2} \right\}$$

$$= 31.47 \text{ in}$$

$$\theta_d = \pi - 2 \sin^{-1} \left[\frac{12 - 6.2}{2(31.47)} \right] = 2.9570 \text{ rad}$$

$$\exp(f\theta_d) = \exp[0.5123(2.9570)] = 4.5489$$

$$V = \frac{\pi dn}{12} = \frac{\pi(6.2)(3100)}{12} = 5031.8 \text{ ft/min}$$

Table 17-13:

$$\text{Angle } \theta = \theta_d \frac{180^\circ}{\pi} = (2.957 \text{ rad}) \left(\frac{180^\circ}{\pi} \right) = 169.42^\circ$$

The footnote regression equation gives K_1 without interpolation:

$$K_1 = 0.143543 + 0.007468(169.42^\circ) - 0.000015052(169.42^\circ)^2 = 0.9767$$

The design power is

$$H_d = H_{\text{nom}} K_s n_d = 3(1.3)(1) = 3.9 \text{ hp}$$

From Table 17-14 for B90, $K_2 = 1$. From Table 17-12 take a marginal entry of $H_{\text{tab}} = 4$, although extrapolation would give a slightly lower H_{tab} .

$$\begin{aligned} \text{Eq. (17-17):} \quad H_a &= K_1 K_2 H_{\text{tab}} \\ &= 0.9767(1)(4) = 3.91 \text{ hp} \end{aligned}$$

The allowable ΔF_a is given by

$$\Delta F_a = \frac{63025 H_a}{n(d/2)} = \frac{63025(3.91)}{3100(6.2/2)} = 25.6 \text{ lbf}$$

The allowable torque T_a is

$$T_a = \frac{\Delta F_a d}{2} = \frac{25.6(6.2)}{2} = 79.4 \text{ lbf} \cdot \text{in}$$

From Table 17-16, $K_c = 0.965$. Thus, Eq. (17-21) gives,

$$F_c = 0.965 \left(\frac{5031.8}{1000} \right)^2 = 24.4 \text{ lbf}$$

At incipient slip, Eq. (17-9) provides:

$$F_i = \left(\frac{T}{d} \right) \left[\frac{\exp(f\theta) + 1}{\exp(f\theta) - 1} \right] = \left(\frac{79.4}{6.2} \right) \left(\frac{4.5489 + 1}{4.5489 - 1} \right) = 20.0 \text{ lbf}$$

Eq. (17-10):

$$F_1 = F_c + F_i \left[\frac{2 \exp(f\theta)}{\exp(f\theta) + 1} \right] = 24.4 + 20 \left[\frac{2(4.5489)}{4.5489 + 1} \right] = 57.2 \text{ lbf}$$

Thus, $F_2 = F_1 - \Delta F_a = 57.2 - 25.6 = 31.6 \text{ lbf}$

$$\text{Eq. (17-26):} \quad n_{fs} = \frac{H_a N_b}{H_d} = \frac{(3.91)(1)}{3.9} = 1.003 \quad \text{Ans.}$$

If we had extrapolated for H_{tab} , the factor of safety would have been slightly less than one.

Life Use Table 17-16 to find equivalent tensions T_1 and T_2 .

$$T_1 = F_1 + (F_b)_1 = F_1 + \frac{K_b}{d} = 57.2 + \frac{576}{6.2} = 150.1 \text{ lbf}$$

$$T_2 = F_1 + (F_b)_2 = F_1 + \frac{K_b}{D} = 57.2 + \frac{576}{12} = 105.2 \text{ lbf}$$

From Eq. (17-27), the number of belt passes is:

$$N_P = \left[\left(\frac{1193}{150.1} \right)^{-10.929} + \left(\frac{1193}{105.2} \right)^{-10.929} \right]^{-1} = 6.76(10^9)$$

From Eq. (17-28) for $N_P > 10^9$,

$$t = \frac{N_P L_p}{720V} > \frac{10^9(91.8)}{720(5031.8)}$$

$$t > 25\,340 \text{ h} \quad \text{Ans.}$$

Suppose n_{fs} was too small. Compare these results with a 2-belt solution.

$$H_{\text{tab}} = 4 \text{ hp/belt}, \quad T_a = 39.6 \text{ lbf} \cdot \text{in/belt},$$

$$\Delta F_a = 12.8 \text{ lbf/belt}, \quad H_a = 3.91 \text{ hp/belt}$$

$$n_{fs} = \frac{N_b H_a}{H_d} = \frac{N_b H_a}{H_{\text{nom}} K_s} = \frac{2(3.91)}{3(1.3)} = 2.0$$

Also,

$$F_1 = 40.8 \text{ lbf/belt}, \quad F_2 = 28.0 \text{ lbf/belt},$$

$$F_i = 9.99 \text{ lbf/belt}, \quad F_c = 24.4 \text{ lbf/belt}$$

$$(F_b)_1 = 92.9 \text{ lbf/belt}, \quad (F_b)_2 = 48 \text{ lbf/belt}$$

$$T_1 = 133.7 \text{ lbf/belt}, \quad T_2 = 88.8 \text{ lbf/belt}$$

$$N_P = 2.39(10^{10}) \text{ passes}, \quad t > 605\,600 \text{ h}$$

Initial tension of the drive:

$$(F_i)_{\text{drive}} = N_b F_i = 2(9.99) = 20 \text{ lbf}$$

17-18 Given: two B85 V-belts with $d = 5.4$ in, $D = 16$ in, $n = 1200$ rev/min, and $K_s = 1.25$

Table 17-11:

$$L_p = 85 + 1.8 = 86.8 \text{ in}$$

Eq. (17-17b):

$$C = 0.25 \left\{ \left[86.8 - \frac{\pi}{2}(16 + 5.4) \right] + \sqrt{\left[86.8 - \frac{\pi}{2}(16 + 5.4) \right]^2 - 2(16 - 5.4)^2} \right\}$$

$$= 26.05 \text{ in} \quad \text{Ans.}$$

Eq. (17-1):

$$\theta_d = 180^\circ - 2 \sin^{-1} \left[\frac{16 - 5.4}{2(26.05)} \right] = 156.5^\circ$$

From table 17-13 footnote:

$$K_1 = 0.143\,543 + 0.007\,468(156.5^\circ) - 0.000\,015\,052(156.5^\circ)^2 = 0.944$$

Table 17-14:

$$K_2 = 1$$

Belt speed:

$$V = \frac{\pi(5.4)(1200)}{12} = 1696 \text{ ft/min}$$

Use Table 17-12 to interpolate for H_{tab} .

$$H_{\text{tab}} = 1.59 + \left(\frac{2.62 - 1.59}{2000 - 1000} \right) (1696 - 1000) = 2.31 \text{ hp/belt}$$

$$H_a = K_1 K_2 N_b H_{\text{tab}} = 1(0.944)(2)(2.31) = 4.36 \text{ hp}$$

Assuming $n_d = 1$

$$H_d = K_s H_{\text{nom}} n_d = 1.25(1) H_{\text{nom}}$$

For a factor of safety of one,

$$H_a = H_d$$

$$4.36 = 1.25 H_{\text{nom}}$$

$$H_{\text{nom}} = \frac{4.36}{1.25} = 3.49 \text{ hp} \quad \text{Ans.}$$

17-19 Given: $H_{\text{nom}} = 60 \text{ hp}$, $n = 400 \text{ rev/min}$, $K_s = 1.4$, $d = D = 26 \text{ in}$ on 12 ft centers. Design task: specify V-belt and number of strands (belts). *Tentative decision:* Use D360 belts.

Table 17-11: $L_p = 360 + 3.3 = 363.3 \text{ in}$

Eq. (17-16b):

$$C = 0.25 \left\{ \left[363.3 - \frac{\pi}{2}(26 + 26) \right] + \sqrt{\left[363.3 - \frac{\pi}{2}(26 + 26) \right]^2 - 2(26 - 26)^2} \right\}$$

$$= 140.8 \text{ in (nearly 144 in)}$$

$$\theta_d = \pi, \quad \theta_D = \pi, \quad \exp[0.5123\pi] = 5.0,$$

$$V = \frac{\pi dn}{12} = \frac{\pi(26)(400)}{12} = 2722.7 \text{ ft/min}$$

Table 17-13: For $\theta = 180^\circ$, $K_1 = 1$

Table 17-14: For D360, $K_2 = 1.10$

Table 17-12: $H_{\text{tab}} = 16.94 \text{ hp}$ by interpolation

Thus, $H_a = K_1 K_2 H_{\text{tab}} = 1(1.1)(16.94) = 18.63 \text{ hp}$

$$H_d = K_s H_{\text{nom}} = 1.4(60) = 84 \text{ hp}$$

Number of belts, N_b

$$N_b = \frac{K_s H_{\text{nom}}}{K_1 K_2 H_{\text{tab}}} = \frac{H_d}{H_a} = \frac{84}{18.63} = 4.51$$

Round up to five belts. It is left to the reader to repeat the above for belts such as C360 and E360.

$$\Delta F_a = \frac{63\,025 H_a}{n(d/2)} = \frac{63\,025(18.63)}{400(26/2)} = 225.8 \text{ lbf/belt}$$

$$T_a = \frac{(\Delta F_a)d}{2} = \frac{225.8(26)}{2} = 2935 \text{ lbf} \cdot \text{in/belt}$$

Eq. (17-21):

$$F_c = 3.498 \left(\frac{V}{1000} \right)^2 = 3.498 \left(\frac{2722.7}{1000} \right)^2 = 25.9 \text{ lbf/belt}$$

At fully developed friction, Eq. (17-9) gives

$$F_i = \frac{T}{d} \left[\frac{\exp(f\theta) + 1}{\exp(f\theta) - 1} \right] = \frac{2935}{26} \left(\frac{5 + 1}{5 - 1} \right) = 169.3 \text{ lbf/belt}$$

$$\text{Eq. (17-10): } F_1 = F_c + F_i \left[\frac{2 \exp(f\theta)}{\exp(f\theta) + 1} \right] = 25.9 + 169.3 \left[\frac{2(5)}{5 + 1} \right] = 308.1 \text{ lbf/belt}$$

$$F_2 = F_1 - \Delta F_a = 308.1 - 225.8 = 82.3 \text{ lbf/belt}$$

$$n_{fs} = \frac{H_a N_b}{H_d} = \frac{(185.63)}{84} = 1.109 \quad \text{Ans.}$$

Reminder: Initial tension is for the *drive*

$$(F_i)_{\text{drive}} = N_b F_i = 5(169.3) = 846.5 \text{ lbf}$$

A 360 belt is at the right-hand edge of the range of center-to-center pulley distances.

$$D \leq C \leq 3(D + d)$$

$$26 \leq C \leq 3(26 + 26)$$

17-20 Preliminaries: $D \doteq 60$ in, 14-in wide rim, $H_{\text{nom}} = 50$ hp, $n = 875$ rev/min, $K_s = 1.2$, $n_d = 1.1$, $m_G = 875/170 = 5.147$, $d \doteq 60/5.147 = 11.65$ in

(a) From Table 17-9, an 11-in sheave exceeds C-section minimum diameter and precludes D- and E-section V-belts.

Decision: Use $d = 11$ in, C270 belts

Table 17-11: $L_p = 270 + 2.9 = 272.9$ in

$$C = 0.25 \left\{ \left[272.9 - \frac{\pi}{2}(60 + 11) \right] + \sqrt{\left[272.9 - \frac{\pi}{2}(60 + 11) \right]^2 - 2(60 - 11)^2} \right\}$$

$$= 76.78 \text{ in}$$

This fits in the range

$$D < C < 3(D + d)$$

$$60 < C < 3(60 + 11)$$

$$60 \text{ in} < C < 213 \text{ in}$$

$$\theta_d = \pi - 2 \sin^{-1} \left[\frac{60 - 11}{2(76.78)} \right] = 2.492 \text{ rad}$$

$$\theta_D = \pi + 2 \sin^{-1} \left[\frac{60 - 11}{2(76.78)} \right] = 3.791 \text{ rad}$$

$$\exp[0.5123(2.492)] = 3.5846$$

For the flat on flywheel

$$\exp[0.13(3.791)] = 1.637$$

$$V = \frac{\pi dn}{12} = \frac{\pi(11)(875)}{12} = 2519.8 \text{ ft/min}$$

Table 17-13: Regression equation gives $K_1 = 0.90$

Table 17-14: $K_2 = 1.15$

Table 17-12: $H_{\text{tab}} = 7.83 \text{ hp/belt}$ by interpolation

Eq. (17-17): $H_a = K_1 K_2 H_{\text{tab}} = 0.905(1.15)(7.83) = 8.15 \text{ hp}$

Eq. (17-19): $H_d = H_{\text{nom}} K_s n_d = 50(1.2)(1.1) = 66 \text{ hp}$

Eq. (17-20): $N_b = \frac{H_d}{H_a} = \frac{66}{8.15} = 8.1 \text{ belts}$

Decision: Use 9 belts. On a per belt basis,

$$\Delta F_a = \frac{63\,025 H_a}{n(d/2)} = \frac{63\,025(8.15)}{875(11/2)} = 106.7 \text{ lbf/belt}$$

$$T_a = \frac{\Delta F_a d}{2} = \frac{106.7(11)}{2} = 586.9 \text{ lbf per belt}$$

$$F_c = 1.716 \left(\frac{V}{1000} \right)^2 = 1.716 \left(\frac{2519.8}{1000} \right)^2 = 10.9 \text{ lbf/belt}$$

At fully developed friction, Eq. (17-9) gives

$$F_i = \frac{T}{d} \left[\frac{\exp(f\theta_d) + 1}{\exp(f\theta_d) - 1} \right] = \frac{586.9}{11} \left(\frac{3.5846 + 1}{3.5846 - 1} \right) = 94.6 \text{ lbf/belt}$$

Eq. (17-10):

$$F_1 = F_c + F_i \left[\frac{2 \exp(f\theta_d)}{\exp(f\theta_d) + 1} \right] = 10.9 + 94.6 \left[\frac{2(3.5846)}{3.5846 + 1} \right] = 158.8 \text{ lbf/belt}$$

$$F_2 = F_1 - \Delta F_a = 158.8 - 106.7 = 52.1 \text{ lbf/belt}$$

$$n_{fs} = \frac{N_b H_a}{H_d} = \frac{9(8.15)}{66} = 1.11 \text{ O.K. Ans.}$$

Durability:

$$(F_b)_1 = 145.45 \text{ lbf/belt}, \quad (F_b)_2 = 76.7 \text{ lbf/belt}$$

$$T_1 = 304.4 \text{ lbf/belt}, \quad T_2 = 185.6 \text{ lbf/belt}$$

and

$$t > 150\,000 \text{ h}$$

Remember: $(F_i)_{\text{drive}} = 9(94.6) = 851.4 \text{ lbf}$

Table 17-9: C-section belts are 7/8" wide. Check sheave groove spacing to see if 14"-width is accommodating.

(b) The fully developed friction torque on the flywheel using the flats of the V-belts is

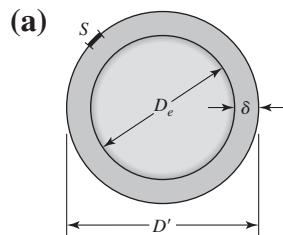
$$T_{\text{flat}} = \Delta F_i \left[\frac{\exp(f\theta) - 1}{\exp(f\theta) + 1} \right] = 60(94.6) \left(\frac{1.637 - 1}{1.637 + 1} \right) = 1371 \text{ lbf} \cdot \text{in} \text{ per belt}$$

The flywheel torque should be

$$T_{\text{fly}} = m_G T_a = 5.147(586.9) = 3021 \text{ lbf} \cdot \text{in} \text{ per belt}$$

but it is not. There are applications, however, in which it will work. For example, make the flywheel controlling. Yes. *Ans.*

17-21



S is the spliced-in string segment length

D_e is the equatorial diameter

D' is the spliced string diameter

δ is the radial clearance

$$S + \pi D_e = \pi D' = \pi(D_e + 2\delta) = \pi D_e + 2\pi\delta$$

From which

$$\delta = \frac{S}{2\pi}$$

The radial clearance is thus *independent* of D_e .

$$\delta = \frac{12(6)}{2\pi} = 11.5 \text{ in} \quad \text{Ans.}$$

This is true whether the sphere is the earth, the moon or a marble. Thinking in terms of a radial or diametral increment removes the basic size from the problem. *Viewpoint again!*

(b) and (c)

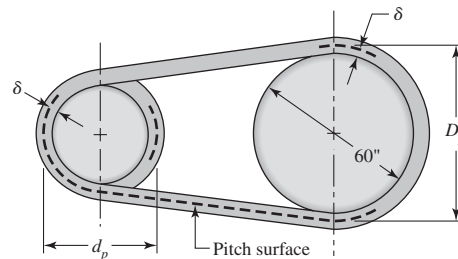
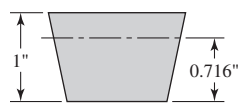


Table 17-9: For an E210 belt, the thickness is 1 in.



$$d_P - d_i = \frac{210 + 4.5}{\pi} - \frac{210}{\pi} = \frac{4.5}{\pi}$$

$$2\delta = \frac{4.5}{\pi}$$

$$\delta = \frac{4.5}{2\pi} = 0.716 \text{ in}$$

The pitch diameter of the flywheel is

$$D_P - 2\delta = D$$

$$D_P = D + 2\delta = 60 + 2(0.716) = 61.43 \text{ in}$$

We could make a table:

Diametral Growth	Section				
	A	B	C	D	E
2δ	$\frac{1.3}{\pi}$	$\frac{1.8}{\pi}$	$\frac{2.9}{\pi}$	$\frac{3.3}{\pi}$	$\frac{4.5}{\pi}$

The velocity ratio for the D-section belt of Prob. 17-20 is

$$m'_G = \frac{D + 2\delta}{d} = \frac{60 + 3.3/\pi}{11} = 5.55 \text{ Ans.}$$

for the V-flat drive as compared to $m_a = 60/11 = 5.455$ for the VV drive.

The pitch diameter of the pulley is still $d = 11$ in, so the new angle of wrap, θ_d , is

$$\theta_d = \pi - 2 \sin^{-1} \left(\frac{D + 2\delta - d}{2C} \right) \text{ Ans.}$$

$$\theta_D = \pi + 2 \sin^{-1} \left(\frac{D + 2\delta - d}{2C} \right) \text{ Ans.}$$

Equations (17-16a) and (17-16b) are modified as follows

$$L_p = 2C + \frac{\pi}{2}(D + 2\delta + d) + \frac{(D + \delta - d)^2}{4C} \text{ Ans.}$$

$$C_p = 0.25 \left\{ \left[L_p - \frac{\pi}{2}(D + 2\delta + d) \right] + \sqrt{\left[L_p - \frac{\pi}{2}(D + 2\delta + d) \right]^2 - 2(D + 2\delta - d)^2} \right\} \text{ Ans.}$$

The changes are small, but if you are writing a computer code for a V-flat drive, remember that θ_d and θ_D changes are exponential.

17-22 This design task involves specifying a drive to couple an electric motor running at 1720 rev/min to a blower running at 240 rev/min, transmitting two horsepower with a center distance of at least 22 inches. Instead of focusing on the steps, we will display two different designs side-by-side for study. Parameters are in a “per belt” basis with per drive quantities shown along side, where helpful.

Parameter	Four A-90 Belts	Two A-120 Belts
m_G	7.33	7.142
K_s	1.1	1.1
n_d	1.1	1.1
K_1	0.877	0.869
K_2	1.05	1.15
d , in	3.0	4.2
D , in	22	30
θ_d , rad	2.333	2.287
V , ft/min	1350.9	1891
$\exp(f\theta_d)$	3.304	3.2266
L_p , in	91.3	101.3
C , in	24.1	31
H_{tab} , uncorr.	0.783	1.662
$N_b H_{\text{tab}}$, uncorr.	3.13	3.326
T_a , lbf · in	26.45(105.8)	60.87(121.7)
ΔF_a , lbf	17.6(70.4)	29.0(58)
H_a , hp	0.721(2.88)	1.667(3.33)
n_{fs}	1.192	1.372
F_1 , lbf	26.28(105.2)	44(88)
F_2 , lbf	8.67(34.7)	15(30)
$(F_b)_1$, lbf	73.3(293.2)	52.4(109.8)
$(F_b)_2$, lbf	10(40)	7.33(14.7)
F_c , lbf	1.024	2.0
F_i , lbf	16.45(65.8)	27.5(55)
T_1 , lbf · in	99.2	96.4
T_2 , lbf · in	36.3	57.4
N' , passes	1.61(10^9)	2.3(10^9)
$t > h$	93 869	89 080

Conclusions:

- Smaller sheaves lead to more belts.
- Larger sheaves lead to larger D and larger V .
- Larger sheaves lead to larger tabulated power.
- The discrete numbers of belts obscures some of the variation. The factors of safety exceed the design factor by differing amounts.

17-23 In Ex. 17-5 the selected chain was 140-3, making the pitch of this 140 chain $14/8 = 1.75$ in. Table 17-19 confirms.

17-24

(a) Eq. (17-32):
$$H_1 = 0.004 N_1^{1.08} n_1^{0.9} p^{(3-0.07p)}$$

Eq. (17-33):
$$H_2 = \frac{1000 K_r N_1^{1.5} p^{0.8}}{n_1^{1.5}}$$

Equating and solving for n_1 gives

$$n_1 = \left[\frac{0.25(10^6)K_r N_1^{0.42}}{p^{(2.2-0.07p)}} \right]^{1/2.4} \quad \text{Ans.}$$

(b) For a No. 60 chain, $p = 6/8 = 0.75$ in, $N_1 = 17$, $K_r = 17$

$$n_1 = \left\{ \frac{0.25(10^6)(17)(17)^{0.42}}{0.75^{[2.2-0.07(0.75)]}} \right\}^{1/2.4} = 1227 \text{ rev/min} \quad \text{Ans.}$$

Table 17-20 confirms that this point occurs at 1200 ± 200 rev/min.

(c) Life predictions using Eq. (17-40) are possible at speeds greater than 1227 rev/min. Ans.

17-25 Given: a double strand No. 60 roller chain with $p = 0.75$ in, $N_1 = 13$ teeth at 300 rev/min, $N_2 = 52$ teeth.

- (a) Table 17-20: $H_{\text{tab}} = 6.20$ hp
 Table 17-22: $K_1 = 0.75$
 Table 17-23: $K_2 = 1.7$
 Use $K_s = 1$
 Eq. (17-37):

$$H_a = K_1 K_2 H_{\text{tab}} = 0.75(1.7)(6.20) = 7.91 \text{ hp} \quad \text{Ans.}$$

(b) Eqs. (17-35) and (17-36) with $L/p = 82$

$$A = \frac{13 + 52}{2} - 82 = -49.5$$

$$C = \frac{p}{4} \left[49.5 + \sqrt{49.5^2 - 8 \left(\frac{52 - 13}{2\pi} \right)^2} \right] = 23.95p$$

$$C = 23.95(0.75) = 17.96 \text{ in, round up to 18 in} \quad \text{Ans.}$$

(c) For 30 percent less power transmission,

$$H = 0.7(7.91) = 5.54 \text{ hp}$$

$$T = \frac{63\,025(5.54)}{300} = 1164 \text{ lbf} \cdot \text{in} \quad \text{Ans.}$$

Eq. (17-29):

$$D = \frac{0.75}{\sin(180^\circ/13)} = 3.13 \text{ in}$$

$$F = \frac{T}{r} = \frac{1164}{3.13/2} = 744 \text{ lbf} \quad \text{Ans.}$$

17-26 Given: No. 40-4 chain, $N_1 = 21$ teeth for $n = 2000$ rev/min, $N_2 = 84$ teeth, $h = 20\,000$ hours.

(a) Chain pitch is $p = 4/8 = 0.500$ in and $C \doteq 20$ in.

$$\text{Eq. (17-34): } \frac{L}{p} = \frac{2(20)}{0.5} + \frac{21 + 84}{2} + \frac{(84 - 21)^2}{4\pi^2(20/0.5)} = 135 \text{ pitches (or links)}$$

$$L = 135(0.500) = 67.5 \text{ in Ans.}$$

(b) Table 17-20: $H_{\text{tab}} = 7.72$ hp (post-extreme power)

Eq. (17-40): Since K_1 is required, the $N_1^{3.75}$ term is omitted.

$$\text{const} = \frac{(7.72^{2.5})(15\,000)}{135} = 18\,399$$

$$H'_{\text{tab}} = \left[\frac{18\,399(135)}{20\,000} \right]^{1/2.5} = 6.88 \text{ hp Ans.}$$

(c) Table 17-22:

$$K_1 = \left(\frac{21}{17} \right)^{1.5} = 1.37$$

Table 17-23: $K_2 = 3.3$

$$H_a = K_1 K_2 H'_{\text{tab}} = 1.37(3.3)(6.88) = 31.1 \text{ hp Ans.}$$

(d)
$$V = \frac{N_1 p n}{12} = \frac{21(0.5)(2000)}{12} = 1750 \text{ ft/min}$$

$$F_1 = \frac{33\,000(31.1)}{1750} = 586 \text{ lbf Ans.}$$

17-27 This is our first design/selection task for chain drives. A possible decision set:

A priori decisions

- Function: H_{nom} , n_1 , space, life, K_s
- Design factor: n_d
- Sprockets: Tooth counts N_1 and N_2 , factors K_1 and K_2

Decision variables

- Chain number
- Strand count
- Lubrication type
- Chain length in pitches

Function: Motor with $H_{\text{nom}} = 25$ hp at $n = 700$ rev/min; pump at $n = 140$ rev/min;
 $m_G = 700/140 = 5$

Design Factor: $n_d = 1.1$

Sprockets: Tooth count $N_2 = m_G N_1 = 5(17) = 85$ teeth—odd and unavailable. Choose 84 teeth. *Decision:* $N_1 = 17$, $N_2 = 84$

Evaluate K_1 and K_2

Eq. (17-38): $H_d = H_{nom} K_s n_d$

Eq. (17-37): $H_a = K_1 K_2 H_{tab}$

Equate H_d to H_a and solve for H_{tab} :

$$H_{tab} = \frac{K_s n_d H_{nom}}{K_1 K_2}$$

Table 17-22: $K_1 = 1$

Table 17-23: $K_2 = 1, 1.7, 2.5, 3.3$ for 1 through 4 strands

$$H'_{tab} = \frac{1.5(1.1)(25)}{(1)K_2} = \frac{41.25}{K_2}$$

Prepare a table to help with the design decisions:

Strands	K_2	H'_{tab}	Chain No.	H_{tab}	n_{fs}	Lub. Type
1	1.0	41.3	100	59.4	1.58	B
2	1.7	24.3	80	31.0	1.40	B
3	2.5	16.5	80	31.0	2.07	B
4	3.3	12.5	60	13.3	1.17	B

Design Decisions

We need a figure of merit to help with the choice. If the best was 4 strands of No. 60 chain, then

Decision #1 and #2: Choose four strand No. 60 roller chain with $n_{fs} = 1.17$.

$$n_{fs} = \frac{K_1 K_2 H_{tab}}{K_s H_{nom}} = \frac{1(3.3)(13.3)}{1.5(25)} = 1.17$$

Decision #3: Choose Type B lubrication

Analysis:

Table 17-20: $H_{tab} = 13.3$ hp

Table 17-19: $p = 0.75$ in

Try $C = 30$ in in Eq. (17-34):

$$\begin{aligned} \frac{L}{p} &= \frac{2C}{p} + \frac{N_1 + N_2}{2} + \frac{(N_2 - N_1)^2}{4\pi^2 C/p} \\ &= 2(30/0.75) + \frac{17 + 84}{2} + \frac{(84 - 17)^2}{4\pi^2(30/0.75)} \\ &= 133.3 \rightarrow 134 \end{aligned}$$

From Eq. (17-35) with $p = 0.75$ in, $C = 30.26$ in.

Decision #4: Choose $C = 30.26$ in.

17-28 Follow the decision set outlined in Prob. 17-27 solution. We will form two tables, the first for a 15 000 h life goal, and a second for a 50 000 h life goal. The comparison is useful.

Function: $H_{\text{nom}} = 50$ hp at $n = 1800$ rev/min, $n_{\text{pump}} = 900$ rev/min

$$m_G = 1800/900 = 2, \quad K_s = 1.2$$

life = 15 000 h, then repeat with life = 50 000 h

Design factor: $n_d = 1.1$

Sprockets: $N_1 = 19$ teeth, $N_2 = 38$ teeth

Table 17-22 (post extreme):

$$K_1 = \left(\frac{N_1}{17}\right)^{1.5} = \left(\frac{19}{17}\right)^{1.5} = 1.18$$

Table 17-23:

$$K_2 = 1, 1.7, 2.5, 3.3, 3.9, 4.6, 6.0$$

Decision variables for 15 000 h life goal:

$$H'_{\text{tab}} = \frac{K_s n_d H_{\text{nom}}}{K_1 K_2} = \frac{1.2(1.1)(50)}{1.18 K_2} = \frac{55.9}{K_2} \quad (1)$$

$$n_{fs} = \frac{K_1 K_2 H_{\text{tab}}}{K_s H_{\text{nom}}} = \frac{1.18 K_2 H_{\text{tab}}}{1.2(50)} = 0.0197 K_2 H_{\text{tab}}$$

Form a table for a 15 000 h life goal using these equations.

	K_2	H'_{tab}	Chain #	H_{tab}	n_{fs}	Lub
1	1.0	55.90	120	21.6	0.423	C'
2	1.7	32.90	120	21.6	0.923	C'
3	2.5	22.40	120	21.6	1.064	C'
4	3.3	16.90	120	21.6	1.404	C'
5	3.9	14.30	80	15.6	1.106	C'
6	4.6	12.20	60	12.4	1.126	C'
8	6.0	9.32	60	12.4	1.416	C'

There are 4 possibilities where $n_{fs} \geq 1.1$

Decision variables for 50 000 h life goal

From Eq. (17-40), the power-life tradeoff is:

$$(H'_{\text{tab}})^{2.5} 15\,000 = (H''_{\text{tab}})^{2.5} 50\,000$$

$$H''_{\text{tab}} = \left[\frac{15\,000}{50\,000} (H'_{\text{tab}})^{2.5} \right]^{1/2.5} = 0.618 H'_{\text{tab}}$$

Substituting from (1),

$$H''_{\text{tab}} = 0.618 \left(\frac{55.9}{K_2} \right) = \frac{34.5}{K_2}$$

The H'' notation is only necessary because we constructed the first table, which we normally would not do.

$$n_{fs} = \frac{K_1 K_2 H''_{\text{tab}}}{K_S H_{\text{nom}}} = \frac{K_1 K_2 (0.618 H'_{\text{tab}})}{K_S H_{\text{nom}}} = 0.618 [(0.0197) K_2 H_{\text{tab}}] = 0.0122 K_2 H_{\text{tab}}$$

Form a table for a 50 000 h life goal.

	K_2	H''_{tab}	Chain #	H_{tab}	n_{fs}	Lub
1	1.0	34.50	120	21.6	0.264	C'
2	1.7	20.30	120	21.6	0.448	C'
3	2.5	13.80	120	21.6	0.656	C'
4	3.3	10.50	120	21.6	0.870	C'
5	3.9	8.85	120	21.6	1.028	C'
6	4.6	7.60	120	21.6	1.210	C'
8	6.0	5.80	80	15.6	1.140	C'

There are two possibilities in the second table with $n_{fs} \geq 1.1$. (The tables allow for the identification of a longer life one of the outcomes.) We need a figure of merit to help with the choice; costs of sprockets and chains are thus needed, but is more information than we have.

Decision #1: #80 Chain (smaller installation) *Ans.*

$$n_{fs} = 0.0122 K_2 H_{\text{tab}} = 0.0122 (8.0) (15.6) = 1.14 \quad O.K.$$

Decision #2: 8-Strand, No. 80 *Ans.*

Decision #3: Type C' Lubrication *Ans.*

Decision #4: $p = 1.0$ in, C is in midrange of 40 pitches

$$\begin{aligned} \frac{L}{p} &= \frac{2C}{p} + \frac{N_1 + N_2}{2} + \frac{(N_2 - N_1)^2}{4\pi^2 C/p} \\ &= 2(40) + \frac{19 + 38}{2} + \frac{(38 - 19)^2}{4\pi^2(40)} \\ &= 108.7 \Rightarrow 110 \text{ even integer } \textit{Ans.} \end{aligned}$$

Eq. (17-36):

$$A = \frac{N_1 + N_2}{2} - \frac{L}{p} = \frac{19 + 38}{2} - 110 = -81.5$$

$$\text{Eq. (17-35): } \frac{C}{p} = \frac{1}{4} \left[81.5 + \sqrt{81.5^2 - 8 \left(\frac{38 - 19}{2\pi} \right)^2} \right] = 40.64$$

$$C = p(C/p) = 1.0(40.64) = 40.64 \text{ in (for reference) } \textit{Ans.}$$

17-29 The objective of the problem is to explore factors of safety in wire rope. We will express strengths as tensions.

(a) Monitor steel 2-in 6×19 rope, 480 ft long

Table 17-2: Minimum diameter of a sheave is $30d = 30(2) = 60$ in, preferably $45(2) = 90$ in. The hoist abuses the wire when it is bent around a sheave. Table 17-24 gives the nominal tensile strength as 106 kpsi. The ultimate load is

$$F_u = (S_u)_{\text{nom}} A_{\text{nom}} = 106 \left[\frac{\pi(2)^2}{4} \right] = 333 \text{ kip} \quad \text{Ans.}$$

The tensile loading of the wire is given by Eq. (17-46)

$$F_t = \left(\frac{W}{m} + wl \right) \left(1 + \frac{a}{g} \right)$$

$$W = 4(2) = 8 \text{ kip}, \quad m = 1$$

Table (17-24):

$$wl = 1.60d^2l = 1.60(2^2)(480) = 3072 \text{ lbf} \quad \text{or} \quad 3.072 \text{ kip}$$

Therefore,

$$F_t = (8 + 3.072) \left(1 + \frac{2}{32.2} \right) = 11.76 \text{ kip} \quad \text{Ans.}$$

Eq. (17-48):

$$F_b = \frac{E_r d_w A_m}{D}$$

and for the 72-in drum

$$F_b = \frac{12(10^6)(2/13)(0.38)(2^2)(10^{-3})}{72} = 39 \text{ kip} \quad \text{Ans.}$$

For use in Eq. (17-44), from Fig. 17-21

$$(p/S_u) = 0.0014$$

$$S_u = 240 \text{ kpsi}, \quad \text{p. 908}$$

$$F_f = \frac{0.0014(240)(2)(72)}{2} = 24.2 \text{ kip} \quad \text{Ans.}$$

(b) Factors of safety

Static, no bending:

$$n = \frac{F_u}{F_t} = \frac{333}{11.76} = 28.3 \quad \text{Ans.}$$

Static, with bending:

$$\text{Eq. (17-49):} \quad n_s = \frac{F_u - F_b}{F_t} = \frac{333 - 39}{11.76} = 25.0 \quad \text{Ans.}$$

Fatigue without bending:

$$n_f = \frac{F_f}{F_t} = \frac{24.2}{11.76} = 2.06 \quad \text{Ans.}$$

Fatigue, with bending: For a life of $0.1(10^6)$ cycles, from Fig. 17-21

$$(p/S_u) = 4/1000 = 0.004$$

$$F_f = \frac{0.004(240)(2)(72)}{2} = 69.1 \text{ kip}$$

Eq. (17-50):
$$n_f = \frac{69.1 - 39}{11.76} = 2.56 \quad \text{Ans.}$$

If we were to use the endurance strength at 10^6 cycles ($F_f = 24.2$ kip) the factor of safety would be less than 1 indicating 10^6 cycle life impossible.

Comments:

- There are a number of factors of safety used in wire rope analysis. They are different, with different meanings. There is no substitute for knowing exactly which factor of safety is written or spoken.
- Static performance of a rope in tension is impressive.
- In this problem, at the drum, we have a finite life.
- The remedy for fatigue is the use of smaller diameter ropes, with multiple ropes supporting the load. See Ex. 17-6 for the effectiveness of this approach. It will also be used in Prob. 17-30.
- Remind students that wire ropes do not fail suddenly due to fatigue. The outer wires gradually show wear and breaks; such ropes should be retired. Periodic inspections prevent fatigue failures by parting of the rope.

17-30 Since this is a design task, a decision set is useful.

A priori decisions

- Function: load, height, acceleration, velocity, life goal
- Design Factor: n_d
- Material: IPS, PS, MPS or other
- Rope: Lay, number of strands, number of wires per strand

Decision variables:

- Nominal wire size: d
- Number of load-supporting wires: m

From experience with Prob. 17-29, a 1-in diameter rope is not likely to have much of a life, so approach the problem with the d and m decisions open.

Function: 5000 lbf load, 90 foot lift, acceleration = 4 ft/s^2 , velocity = 2 ft/s , life goal = 10^5 cycles

Design Factor: $n_d = 2$

Material: IPS

Rope: Regular lay, 1-in plow-steel 6×19 hoisting

Design variables

Choose 30-in D_{\min} . Table 17-27: $w = 1.60d^2$ lbf/ft

$$wl = 1.60d^2l = 1.60d^2(90) = 144d^2 \text{ lbf, ea.}$$

Eq. (17-46):

$$\begin{aligned} F_t &= \left(\frac{W}{m} + wl \right) \left(1 + \frac{a}{g} \right) = \left(\frac{5000}{m} + 144d^2 \right) \left(1 + \frac{4}{32.2} \right) \\ &= \frac{5620}{m} + 162d^2 \text{ lbf, each wire} \end{aligned}$$

Eq. (17-47):

$$F_f = \frac{(p/S_u)S_u Dd}{2}$$

From Fig. 17-21 for 10^5 cycles, $p/S_u = 0.004$; from p. 908, $S_u = 240\,000$ psi, based on metal area.

$$F_f = \frac{0.004(240\,000)(30d)}{2} = 14\,400d \text{ lbf each wire}$$

Eq. (17-48) and Table 17-27:

$$F_b = \frac{E_w d_w A_m}{D} = \frac{12(10^6)(0.067d)(0.4d^2)}{30} = 10\,720d^3 \text{ lbf, each wire}$$

Eq. (17-45):

$$n_f = \frac{F_f - F_b}{F_t} = \frac{14\,400d - 10\,720d^3}{(5620/m) + 162d^2}$$

We could use a computer program to build a table similar to that of Ex. 17-6. Alternatively, we could recognize that $162d^2$ is small compared to $5620/m$, and therefore eliminate the $162d^2$ term.

$$n_f \doteq \frac{14\,400d - 10\,720d^3}{5620/m} = \frac{m}{5620}(14\,400d - 10\,720d^3)$$

Maximize n_f ,

$$\frac{\partial n_f}{\partial d} = 0 = \frac{m}{5620} [14\,400 - 3(10\,720)d^2]$$

From which

$$d^* = \sqrt{\frac{14\,400}{32\,160}} = 0.669 \text{ in}$$

Back-substituting

$$n_f = \frac{m}{5620} [14\,400(0.669) - 10\,720(0.669^3)] = 1.14 m$$

Thus $n_f = 1.14, 2.28, 3.42, 4.56$ for $m = 1, 2, 3, 4$ respectively. If we choose $d = 0.50$ in, then $m = 2$.

$$n_f = \frac{14\,400(0.5) - 10\,720(0.5^3)}{(5620/2) + 162(0.5)^2} = 2.06$$

This exceeds $n_d = 2$

Decision #1: $d = 1/2$ in

Decision #2: $m = 2$ ropes supporting load. Rope should be inspected weekly for any signs of fatigue (broken outer wires).

Comment: Table 17-25 gives n for freight elevators in terms of velocity.

$$F_u = (S_u)_{\text{nom}} A_{\text{nom}} = 106\,000 \left(\frac{\pi d^2}{4} \right) = 83\,252d^2 \text{ lbf, each wire}$$

$$n = \frac{F_u}{F_t} = \frac{83\,452(0.5)^2}{(5620/2) + 162(0.5)^2} = 7.32$$

By comparison, interpolation for 120 ft/min gives 7.08-close. The category of construction hoists is not addressed in Table 17-25. We should investigate this before proceeding further.

17-31 2000 ft lift, 72 in drum, 6×19 MS rope. Cage and load 8000 lbf, acceleration = 2 ft/s².

(a) Table 17-24: $(S_u)_{\text{nom}} = 106$ kpsi; $S_u = 240$ kpsi (p. 1093, metal area); Fig. 17-22: $(p/S_u)_{10^6} = 0.0014$

$$F_f = \frac{0.0014(240)(72)d}{2} = 12.1d \text{ kip}$$

Table 17-24: $wl = 1.6d^2 2000(10^{-3}) = 3.2d^2 \text{ kip}$

Eq. (17-46):
$$F_t = (W + wl) \left(1 + \frac{a}{g} \right)$$

$$= (8 + 3.2d^2) \left(1 + \frac{2}{32.2} \right)$$

$$= 8.5 + 3.4d^2 \text{ kip}$$

Note that bending is not included.

$$n = \frac{F_f}{F_t} = \frac{12.1d}{8.5 + 3.4d^2}$$

d , in	n
0.500	0.650
1.000	1.020
1.500	1.124
1.625	1.125 ← maximum n Ans.
1.750	1.120
2.000	1.095

(b) Try $m = 4$ strands

$$F_t = \left(\frac{8}{4} + 3.2d^2 \right) \left(1 + \frac{2}{32.2} \right)$$

$$= 2.12 + 3.4d^2 \text{ kip}$$

$$F_f = 12.1d \text{ kip}$$

$$n = \frac{12.1d}{2.12 + 3.4d^2}$$

d , in	n
0.5000	2.037
0.5625	2.130
0.6250	2.193
0.7500	2.250 ← maximum n Ans.
0.8750	2.242
1.0000	2.192

Comparing tables, multiple ropes supporting the load increases the factor of safety, and reduces the corresponding wire rope diameter, a useful perspective.

17-32

$$n = \frac{ad}{b/m + cd^2}$$

$$\frac{dn}{dd} = \frac{(b/m + cd^2)a - ad(2cd)}{(b/m + cd^2)^2} = 0$$

From which

$$d^* = \sqrt{\frac{b}{mc}} \text{ Ans.}$$

$$n^* = \frac{a\sqrt{b/(mc)}}{(b/m) + c[b/(mc)]} = \frac{a}{2} \sqrt{\frac{m}{bc}} \text{ Ans.}$$

These results agree closely with Prob. 17-31 solution. The small differences are due to rounding in Prob. 17-31.

17-33 From Prob. 17-32 solution:

$$n_1 = \frac{ad}{b/m + cd^2}$$

Solve the above equation for m

$$m = \frac{b}{ad/n_1 - cd^2} \tag{1}$$

$$\frac{dm}{ad} = 0 = \frac{[(ad/n_1) - ad^2](0) - b[(a/n_1) - 2cd]}{[(ad/n_1) - cd^2]^2}$$

From which
$$d^* = \frac{a}{2cn_1} \quad \text{Ans.}$$

Substituting this result for d in Eq. (1) gives

$$m^* = \frac{4bcn_1}{a^2} \quad \text{Ans.}$$

17-34

$$A_m = 0.40d^2 = 0.40(2^2) = 1.6 \text{ in}^2$$

$$E_r = 12 \text{ Mpsi}, \quad w = 1.6d^2 = 1.6(2^2) = 6.4 \text{ lbf/ft}$$

$$wl = 6.4(480) = 3072 \text{ lbf}$$

Treat the rest of the system as rigid, so that all of the stretch is due to the cage weighing 1000 lbf and the wire's weight. From Prob. 4-6

$$\begin{aligned} \delta_1 &= \frac{Pl}{AE} + \frac{(wl)l}{2AE} \\ &= \frac{1000(480)(12)}{1.6(12)(10^6)} + \frac{3072(480)(12)}{2(1.6)(12)(10^6)} \\ &= 0.3 + 0.461 = 0.761 \text{ in} \end{aligned}$$

due to cage and wire. The stretch due to the wire, the cart and the cage is

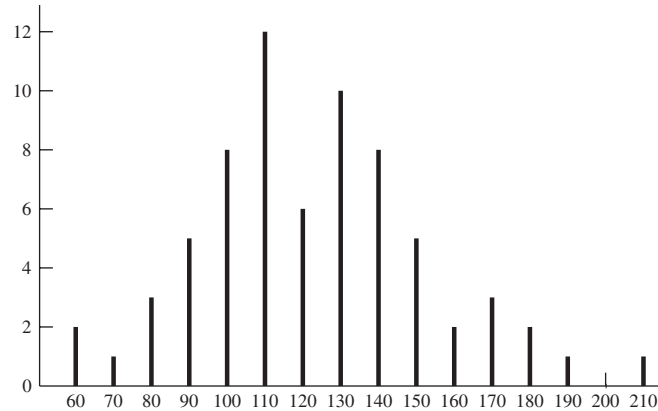
$$\delta_2 = \frac{9000(480)(12)}{1.6(12)(10^6)} + 0.761 = 3.461 \text{ in} \quad \text{Ans.}$$

17-35 to 17-38 Computer programs will vary.

Chapter 20

20-1

(a)



(b) $f/(N\Delta x) = f/(69 \cdot 10) = f/690$

x	f	fx	fx^2	$f/(N\Delta x)$
60	2	120	7200	0.0029
70	1	70	4900	0.0015
80	3	240	19200	0.0043
90	5	450	40500	0.0072
100	8	800	80000	0.0116
110	12	1320	145200	0.0174
120	6	720	86400	0.0087
130	10	1300	169000	0.0145
140	8	1120	156800	0.0116
150	5	750	112500	0.0174
160	2	320	51200	0.0029
170	3	510	86700	0.0043
180	2	360	64800	0.0029
190	1	190	36100	0.0015
200	0	0	0	0
210	1	210	44100	0.0015
	<u>69</u>	<u>8480</u>	<u>1 104 600</u>	

Eq. (20-9) $\bar{x} = \frac{8480}{69} = 122.9 \text{ kcycles}$

Eq. (20-10) $s_x = \left[\frac{1\,104\,600 - 8480^2/69}{69 - 1} \right]^{1/2}$
 $= 30.3 \text{ kcycles} \quad \text{Ans.}$

20-2 Data represents a 7-class histogram with $N = 197$.

x	f	fx	fx^2
174	6	1044	181 656
182	9	1638	298 116
190	44	8360	1 588 400
198	67	13 266	2 626 688
206	53	10 918	2 249 108
214	12	2568	549 552
220	6	1320	290 400
	<u>197</u>	<u>39 114</u>	<u>7 789 900</u>

$$\bar{x} = \frac{39\,114}{197} = 198.55 \text{ kpsi } \textit{Ans.}$$

$$s_x = \left[\frac{7\,783\,900 - 39\,114^2/197}{197 - 1} \right]^{1/2}$$

$$= 9.55 \text{ kpsi } \textit{Ans.}$$

20-3

Form a table:

x	f	fx	fx^2
64	2	128	8192
68	6	408	27 744
72	6	432	31 104
76	9	684	51 984
80	19	1520	121 600
84	10	840	70 560
88	4	352	30 976
92	2	184	16 928
	<u>58</u>	<u>4548</u>	<u>359 088</u>

$$\bar{x} = \frac{4548}{58} = 78.4 \text{ kpsi}$$

$$s_x = \left[\frac{359\,088 - 4548^2/58}{58 - 1} \right]^{1/2} = 6.57 \text{ kpsi}$$

From Eq. (20-14)

$$f(x) = \frac{1}{6.57\sqrt{2\pi}} \exp \left[-\frac{1}{2} \left(\frac{x - 78.4}{6.57} \right)^2 \right]$$

20-4 (a)

y	f	fy	fy^2	y	$f/(Nw)$	$f(y)$	$g(y)$
5.625	1	5.625	31.64063	5.625	0.072727	0.001262	0.000295
5.875	0	0	0	5.875	0	0.008586	0.004088
6.125	0	0	0	6.125	0	0.042038	0.031194
6.375	3	19.125	121.9219	6.375	0.218182	0.148106	0.140262
6.625	3	19.875	131.6719	6.625	0.218182	0.375493	0.393667
6.875	6	41.25	283.5938	6.875	0.436364	0.685057	0.725002
7.125	14	99.75	710.7188	7.125	1.018182	0.899389	0.915128
7.375	15	110.625	815.8594	7.375	1.090909	0.849697	0.822462
7.625	10	76.25	581.4063	7.625	0.727273	0.577665	0.544251
7.875	2	15.75	124.0313	7.875	0.145455	0.282608	0.273138
8.125	1	8.125	66.01563	8.125	0.072727	0.099492	0.10672
	<u>55</u>	<u>396.375</u>	<u>2866.859</u>				

For a normal distribution,

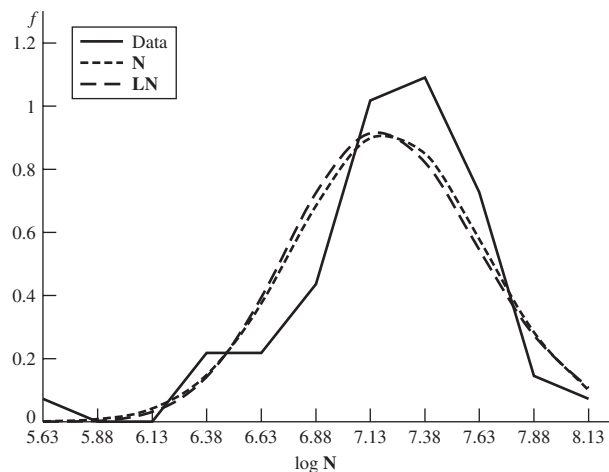
$$\bar{y} = 396.375/55 = 7.207, \quad s_y = \left(\frac{2866.859 - (396.375^2/55)}{55 - 1} \right)^{1/2} = 0.4358$$

$$f(y) = \frac{1}{0.4358\sqrt{2\pi}} \exp \left[-\frac{1}{2} \left(\frac{x - 7.207}{0.4358} \right)^2 \right]$$

For a lognormal distribution,

$$\bar{x} = \ln 7.206818 - \ln \sqrt{1 + 0.060474^2} = 1.9732, \quad s_x = \ln \sqrt{1 + 0.060474^2} = 0.0604$$

$$g(y) = \frac{1}{x(0.0604)(\sqrt{2\pi})} \exp \left[-\frac{1}{2} \left(\frac{\ln x - 1.9732}{0.0604} \right)^2 \right]$$

(b) Histogram

20-5 Distribution is uniform in interval 0.5000 to 0.5008 in, range numbers are $a = 0.5000$, $b = 0.5008$ in.

$$(a) \text{ Eq. (20-22)} \quad \mu_x = \frac{a+b}{2} = \frac{0.5000 + 0.5008}{2} = 0.5004$$

$$\text{Eq. (20-23)} \quad \sigma_x = \frac{b-a}{2\sqrt{3}} = \frac{0.5008 - 0.5000}{2\sqrt{3}} = 0.000231$$

(b) PDF from Eq. (20-20)

$$f(x) = \begin{cases} 1250 & 0.5000 \leq x \leq 0.5008 \text{ in} \\ 0 & \text{otherwise} \end{cases}$$

(c) CDF from Eq. (20-21)

$$F(x) = \begin{cases} 0 & x < 0.5000 \\ (x - 0.5)/0.0008 & 0.5000 \leq x \leq 0.5008 \\ 1 & x > 0.5008 \end{cases}$$

If all smaller diameters are removed by inspection, $a = 0.5002$, $b = 0.5008$

$$\mu_x = \frac{0.5002 + 0.5008}{2} = 0.5005 \text{ in}$$

$$\hat{\sigma}_x = \frac{0.5008 - 0.5002}{2\sqrt{3}} = 0.000173 \text{ in}$$

$$f(x) = \begin{cases} 1666.7 & 0.5002 \leq x \leq 0.5008 \\ 0 & \text{otherwise} \end{cases}$$

$$F(x) = \begin{cases} 0 & x < 0.5002 \\ 1666.7(x - 0.5002) & 0.5002 \leq x \leq 0.5008 \\ 1 & x > 0.5008 \end{cases}$$

20-6 Dimensions produced are due to tool dulling and wear. When parts are mixed, the distribution is uniform. From Eqs. (20-22) and (20-23),

$$a = \mu_x - \sqrt{3}s = 0.6241 - \sqrt{3}(0.000581) = 0.6231 \text{ in}$$

$$b = \mu_x + \sqrt{3}s = 0.6241 + \sqrt{3}(0.000581) = 0.6251 \text{ in}$$

We suspect the dimension was $\frac{0.623}{0.625}$ in *Ans.*

20-7 $F(x) = 0.555x - 33$ mm

(a) Since $F(x)$ is linear, the distribution is uniform at $x = a$

$$F(a) = 0 = 0.555(a) - 33$$

$\therefore a = 59.46$ mm. Therefore, at $x = b$

$$F(b) = 1 = 0.555b - 33$$

$\therefore b = 61.26$ mm. Therefore,

$$F(x) = \begin{cases} 0 & x < 59.46 \text{ mm} \\ 0.555x - 33 & 59.46 \leq x \leq 61.26 \text{ mm} \\ 1 & x > 61.26 \text{ mm} \end{cases}$$

The PDF is dF/dx , thus the range numbers are:

$$f(x) = \begin{cases} 0.555 & 59.46 \leq x \leq 61.26 \text{ mm} \\ 0 & \text{otherwise} \end{cases} \quad \text{Ans.}$$

From the range numbers,

$$\mu_x = \frac{59.46 + 61.26}{2} = 60.36 \text{ mm} \quad \text{Ans.}$$

$$\hat{\sigma}_x = \frac{61.26 - 59.46}{2\sqrt{3}} = 0.520 \text{ mm} \quad \text{Ans.}$$

(b) σ is an uncorrelated quotient $\bar{F} = 3600$ lbf, $\bar{A} = 0.112$ in²

$$C_F = 300/3600 = 0.08333, \quad C_A = 0.001/0.112 = 0.008929$$

From Table 20-6, for σ

$$\bar{\sigma} = \frac{\mu_F}{\mu_A} = \frac{3600}{0.112} = 32143 \text{ psi} \quad \text{Ans.}$$

$$\hat{\sigma}_\sigma = 32143 \left[\frac{(0.08333^2 + 0.008929^2)}{(1 + 0.008929^2)} \right]^{1/2} = 2694 \text{ psi} \quad \text{Ans.}$$

$$C_\sigma = 2694/32143 = 0.0838 \quad \text{Ans.}$$

Since **F** and **A** are lognormal, division is closed and σ is lognormal too.

$$\sigma = \text{LN}(32143, 2694) \text{ psi} \quad \text{Ans.}$$

20-8 Cramer's rule

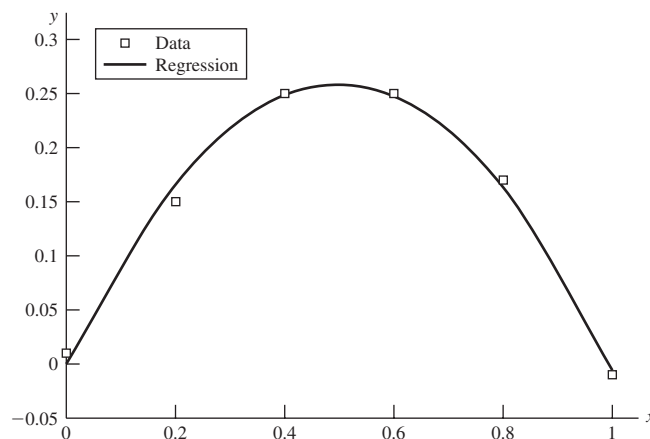
$$a_1 = \frac{\begin{vmatrix} \Sigma y & \Sigma x^2 \\ \Sigma xy & \Sigma x^3 \end{vmatrix}}{\begin{vmatrix} \Sigma x & \Sigma x^2 \\ \Sigma x^2 & \Sigma x^3 \end{vmatrix}} = \frac{\Sigma y \Sigma x^3 - \Sigma xy \Sigma x^2}{\Sigma x \Sigma x^3 - (\Sigma x^2)^2} \quad \text{Ans.}$$

$$a_2 = \frac{\begin{vmatrix} \Sigma x & \Sigma y \\ \Sigma x^2 & \Sigma xy \end{vmatrix}}{\begin{vmatrix} \Sigma x & \Sigma x^2 \\ \Sigma x^2 & \Sigma x^3 \end{vmatrix}} = \frac{\Sigma x \Sigma xy - \Sigma y \Sigma x^2}{\Sigma x \Sigma x^3 - (\Sigma x^2)^2} \quad \text{Ans.}$$

x	y	x^2	x^3	xy
0	0.01	0	0	0
0.2	0.15	0.04	0.008	0.030
0.4	0.25	0.16	0.064	0.100
0.6	0.25	0.36	0.216	0.150
0.8	0.17	0.64	0.512	0.136
1.0	-0.01	1.00	1.000	-0.010
3.0	0.82	2.20	1.800	0.406

$$a_1 = 1.040714 \quad a_2 = -1.04643 \quad \text{Ans.}$$

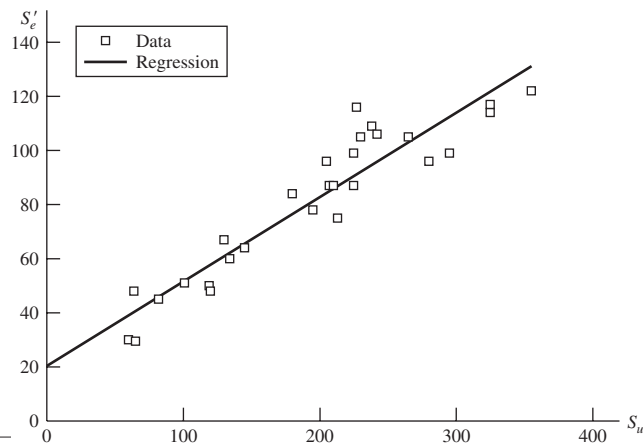
x	Data y	Regression y
0	0.01	0
0.2	0.15	0.166286
0.4	0.25	0.248857
0.6	0.25	0.247714
0.8	0.17	0.162857
1.0	-0.01	-0.00571



20-9

S_u	Data		Regression	
	S'_e	S'_e	S_u^2	$S_u S'_e$
0		20.35675		
60	30	39.08078	3600	1800
64	48	40.32905	4096	3072
65	29.5	40.64112	4225	1917.5
82	45	45.94626	6724	3690
101	51	51.87554	10201	5151
119	50	57.49275	14161	5950
120	48	57.80481	14400	5760
130	67	60.92548	16900	8710
134	60	62.17375	17956	8040
145	64	65.60649	21025	9280
180	84	76.52884	32400	15120
195	78	81.20985	38025	15210
205	96	84.33052	42025	19680
207	87	84.95466	42849	18009
210	87	85.89086	44100	18270
213	75	86.82706	45369	15975
225	99	90.57187	50625	22275
225	87	90.57187	50625	19575
227	116	91.196	51529	26332
230	105	92.1322	52900	24150
238	109	94.62874	56644	25942
242	106	95.87701	58564	25652
265	105	103.0546	70225	27825
280	96	107.7356	78400	26880
295	99	112.4166	87025	29205
325	114	121.7786	105625	37050
325	117	121.7786	105625	38025
355	122	131.1406	126025	43310
5462	2274.5		1251868	501855.5

$$m = 0.312067 \quad b = 20.35675 \quad \text{Ans.}$$



20-10

$$\varepsilon = \sum (y - a_0 - a_2x^2)^2$$

$$\frac{\partial \varepsilon}{\partial a_0} = -2 \sum (y - a_0 - a_2x^2) = 0$$

$$\sum y - na_0 - a_2 \sum x^2 = 0 \Rightarrow \sum y = na_0 + a_2 \sum x^2$$

$$\frac{\partial \varepsilon}{\partial a_2} = 2 \sum (y - a_0 - a_2x^2)(2x) = 0 \Rightarrow \sum xy = a_0 \sum x + a_2 \sum x^3$$

Ans.

Cramer's rule

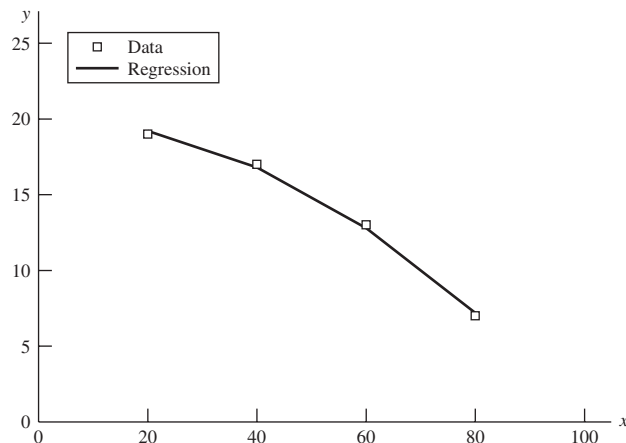
$$a_0 = \frac{\begin{vmatrix} \sum y & \sum x^2 \\ \sum xy & \sum x^3 \end{vmatrix}}{\begin{vmatrix} n & \sum x^2 \\ \sum x & \sum x^3 \end{vmatrix}} = \frac{\sum x^3 \sum y - \sum x^2 \sum xy}{n \sum x^3 - \sum x \sum x^2}$$

$$a_2 = \frac{\begin{vmatrix} n & \sum y \\ \sum x & \sum xy \end{vmatrix}}{\begin{vmatrix} n & \sum x^2 \\ \sum x & \sum x^3 \end{vmatrix}} = \frac{n \sum xy - \sum x \sum y}{n \sum x^3 - \sum x \sum x^2}$$

Data		Regression			
x	y	y	x^2	x^3	xy
20	19	19.2	400	8000	380
40	17	16.8	1600	64000	680
60	13	12.8	3600	216000	780
80	7	7.2	6400	512000	560
200	56		12000	800000	2400

$$a_0 = \frac{800\,000(56) - 12\,000(2400)}{4(800\,000) - 200(12\,000)} = 20$$

$$a_2 = \frac{4(2400) - 200(56)}{4(800\,000) - 200(12\,000)} = -0.002$$

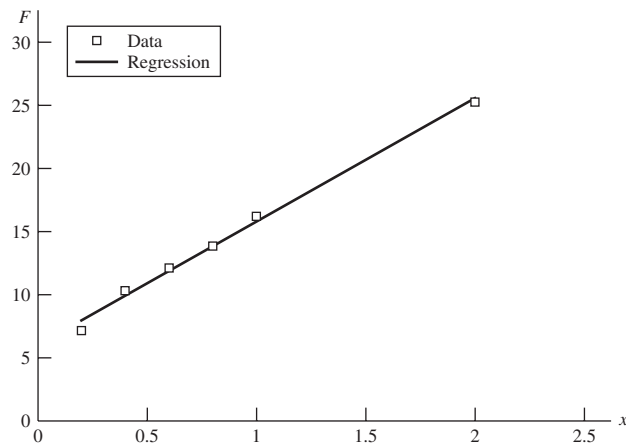


20-11

x	Data		Regression				
	y	y	x^2	y^2	xy	$x - \bar{x}$	$(x - \bar{x})^2$
0.2	7.1	7.931803	0.04	50.41	1.42	-0.633333	0.401111111
0.4	10.3	9.884918	0.16	106.09	4.12	-0.433333	0.187777778
0.6	12.1	11.838032	0.36	146.41	7.26	-0.233333	0.054444444
0.8	13.8	13.791147	0.64	190.44	11.04	-0.033333	0.001111111
1	16.2	15.744262	1.00	262.44	16.20	0.166666	0.027777778
2	25.2	25.509836	4.00	635.04	50.40	1.166666	1.361111111
5	84.7		6.2	1390.83	90.44	0	2.033333333

$$\hat{m} = \bar{k} = \frac{6(90.44) - 5(84.7)}{6(6.2) - (5)^2} = 9.7656$$

$$\hat{b} = \bar{F}_i = \frac{84.7 - 9.7656(5)}{6} = 5.9787$$



(a) $\bar{x} = \frac{5}{6}; \quad \bar{y} = \frac{84.7}{6} = 14.117$

Eq. (20-37)

$$s_{yx} = \sqrt{\frac{1390.83 - 5.9787(84.7) - 9.7656(90.44)}{6 - 2}}$$

$$= 0.556$$

Eq. (20-36)

$$s_{\hat{b}} = 0.556 \sqrt{\frac{1}{6} + \frac{(5/6)^2}{2.0333}} = 0.3964 \text{ lbf}$$

$$F_i = (5.9787, 0.3964) \text{ lbf} \quad \text{Ans.}$$

(b) Eq. (20-35)

$$s_{\hat{m}} = \frac{0.556}{\sqrt{2.0333}} = 0.3899 \text{ lbf/in}$$

$$k = (9.7656, 0.3899) \text{ lbf/in} \quad \text{Ans.}$$

20-12 The expression $\epsilon = \delta/l$ is of the form x/y . Now $\delta = (0.0015, 0.000092)$ in, unspecified distribution; $l = (2.000, 0.0081)$ in, unspecified distribution;

$$C_x = 0.000092/0.0015 = 0.0613$$

$$C_y = 0.0081/2.000 = 0.00075$$

From Table 20-6, $\bar{\epsilon} = 0.0015/2.000 = 0.00075$

$$\begin{aligned} \hat{\sigma}_{\epsilon} &= 0.00075 \left[\frac{0.0613^2 + 0.00405^2}{1 + 0.00405^2} \right]^{1/2} \\ &= 4.607(10^{-5}) = 0.000046 \end{aligned}$$

We can predict $\bar{\epsilon}$ and $\hat{\sigma}_{\epsilon}$ but not the distribution of ϵ .

20-13 $\sigma = \epsilon E$

$\epsilon = (0.0005, 0.000034)$ distribution unspecified; $E = (29.5, 0.885)$ Mpsi, distribution unspecified;

$$C_x = 0.000034/0.0005 = 0.068,$$

$$C_y = 0.0885/29.5 = 0.030$$

σ is of the form x, y

Table 20-6

$$\begin{aligned} \bar{\sigma} &= \bar{\epsilon} \bar{E} = 0.0005(29.5)10^6 = 14750 \text{ psi} \\ \hat{\sigma}_{\sigma} &= 14750(0.068^2 + 0.030^2 + 0.068^2 + 0.030^2)^{1/2} \\ &= 1096.7 \text{ psi} \\ C_{\sigma} &= 1096.7/14750 = 0.07435 \end{aligned}$$

20-14

$$\delta = \frac{Fl}{AE}$$

$F = (14.7, 1.3)$ kip, $A = (0.226, 0.003)$ in², $l = (1.5, 0.004)$ in, $E = (29.5, 0.885)$ Mpsi distributions unspecified.

$$C_F = 1.3/14.7 = 0.0884; \quad C_A = 0.003/0.226 = 0.0133; \quad C_l = 0.004/1.5 = 0.00267;$$

$$C_E = 0.885/29.5 = 0.03$$

Mean of δ :

$$\delta = \frac{Fl}{AE} = Fl \left(\frac{1}{A} \right) \left(\frac{1}{E} \right)$$

From Table 20-6,

$$\begin{aligned}\bar{\delta} &= \bar{F}\bar{l}(1/\bar{A})(1/\bar{E}) \\ \bar{\delta} &= 14\,700(1.5)\frac{1}{0.226}\frac{1}{29.5(10^6)} \\ &= 0.003\,31 \text{ in } \textit{Ans.}\end{aligned}$$

For the standard deviation, using the first-order terms in Table 20-6,

$$\begin{aligned}\hat{\sigma}_{\delta} &\doteq \frac{\bar{F}\bar{l}}{\bar{A}\bar{E}} (C_F^2 + C_l^2 + C_A^2 + C_E^2)^{1/2} = \bar{\delta} (C_F^2 + C_l^2 + C_A^2 + C_E^2)^{1/2} \\ \hat{\sigma}_{\delta} &= 0.003\,31(0.0884^2 + 0.00267^2 + 0.0133^2 + 0.03^2)^{1/2} \\ &= 0.000\,313 \text{ in } \textit{Ans.}\end{aligned}$$

COV

$$C_{\delta} = 0.000\,313/0.003\,31 = 0.0945 \textit{ Ans.}$$

Force COV dominates. There is no distributional information on δ .

20-15 $\mathbf{M} = (15\,000, 1350)$ lbf · in, distribution unspecified; $\mathbf{d} = (2.00, 0.005)$ in distribution unspecified.

$$\sigma = \frac{32\mathbf{M}}{\pi\mathbf{d}^3}, \quad C_M = \frac{1350}{15\,000} = 0.09, \quad C_d = \frac{0.005}{2.00} = 0.0025$$

σ is of the form \mathbf{x}/\mathbf{y} , Table 20-6.

Mean:

$$\begin{aligned}\bar{\sigma} &= \frac{32\bar{M}}{\pi\bar{d}^3} \doteq \frac{32\bar{M}}{\pi\bar{d}^3} = \frac{32(15\,000)}{\pi(2^3)} \\ &= 19\,099 \text{ psi } \textit{Ans.}\end{aligned}$$

Standard Deviation:

$$\hat{\sigma}_{\sigma} = \bar{\sigma} [(C_M^2 + C_{d^3}^2)/(1 + C_{d^3}^2)]^{1/2}$$

From Table 20-6,

$$C_{d^3} \doteq 3C_d = 3(0.0025) = 0.0075$$

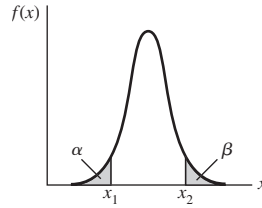
$$\begin{aligned}\hat{\sigma}_{\sigma} &= \bar{\sigma} [(C_M^2 + (3C_d)^2)/(1 + (3C_d)^2)]^{1/2} \\ &= 19\,099[(0.09^2 + 0.0075^2)/(1 + 0.0075^2)]^{1/2} \\ &= 1725 \text{ psi } \textit{Ans.}\end{aligned}$$

COV:

$$C_{\sigma} = \frac{1725}{19\,099} = 0.0903 \textit{ Ans.}$$

Stress COV dominates. No information of distribution of σ .

20-16



Fraction discarded is $\alpha + \beta$. The area under the PDF was unity. Having discarded $\alpha + \beta$ fraction, the ordinates to the truncated PDF are multiplied by a .

$$a = \frac{1}{1 - (\alpha + \beta)}$$

New PDF, $g(x)$, is given by

$$g(x) = \begin{cases} f(x)/[1 - (\alpha + \beta)] & x_1 \leq x \leq x_2 \\ 0 & \text{otherwise} \end{cases}$$

More formal proof: $g(x)$ has the property

$$\begin{aligned} 1 &= \int_{x_1}^{x_2} g(x) dx = a \int_{x_1}^{x_2} f(x) dx \\ 1 &= a \left[\int_{-\infty}^{\infty} f(x) dx - \int_0^{x_1} f(x) dx - \int_{x_2}^{\infty} f(x) dx \right] \\ 1 &= a \{1 - F(x_1) - [1 - F(x_2)]\} \\ a &= \frac{1}{F(x_2) - F(x_1)} = \frac{1}{(1 - \beta) - \alpha} = \frac{1}{1 - (\alpha + \beta)} \end{aligned}$$

20-17

(a) $d = U[0.748, 0.751]$

$$\mu_d = \frac{0.751 + 0.748}{2} = 0.7495 \text{ in}$$

$$\hat{\sigma}_d = \frac{0.751 - 0.748}{2\sqrt{3}} = 0.000866 \text{ in}$$

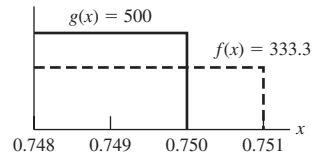
$$f(x) = \frac{1}{b - a} = \frac{1}{0.751 - 0.748} = 333.3 \text{ in}^{-1}$$

$$F(x) = \frac{x - 0.748}{0.751 - 0.748} = 333.3(x - 0.748)$$

$$(b) \quad F(x_1) = F(0.748) = 0$$

$$F(x_2) = (0.750 - 0.748)333.3 = 0.6667$$

If $g(x)$ is truncated, PDF becomes



$$g(x) = \frac{f(x)}{F(x_2) - F(x_1)} = \frac{333.3}{0.6667 - 0} = 500 \text{ in}^{-1}$$

$$\mu_x = \frac{a' + b'}{2} = \frac{0.748 + 0.750}{2} = 0.749 \text{ in}$$

$$\hat{\sigma}_x = \frac{b' - a'}{2\sqrt{3}} = \frac{0.750 - 0.748}{2\sqrt{3}} = 0.000577 \text{ in}$$

20-18 From Table A-10, 8.1% corresponds to $z_1 = -1.4$ and 5.5% corresponds to $z_2 = +1.6$.

$$k_1 = \mu + z_1 \hat{\sigma}$$

$$k_2 = \mu + z_2 \hat{\sigma}$$

From which

$$\begin{aligned} \mu &= \frac{z_2 k_1 - z_1 k_2}{z_2 - z_1} = \frac{1.6(9) - (-1.4)11}{1.6 - (-1.4)} \\ &= 9.933 \end{aligned}$$

$$\begin{aligned} \hat{\sigma} &= \frac{k_2 - k_1}{z_2 - z_1} \\ &= \frac{11 - 9}{1.6 - (-1.4)} = 0.6667 \end{aligned}$$

The original density function is

$$f(k) = \frac{1}{0.6667\sqrt{2\pi}} \exp \left[-\frac{1}{2} \left(\frac{k - 9.933}{0.6667} \right)^2 \right] \quad \text{Ans.}$$

20-19 From Prob. 20-1, $\mu = 122.9$ kcycles and $\hat{\sigma} = 30.3$ kcycles.

$$z_{10} = \frac{x_{10} - \mu}{\hat{\sigma}} = \frac{x_{10} - 122.9}{30.3}$$

$$x_{10} = 122.9 + 30.3z_{10}$$

From Table A-10, for 10 percent failure, $z_{10} = -1.282$

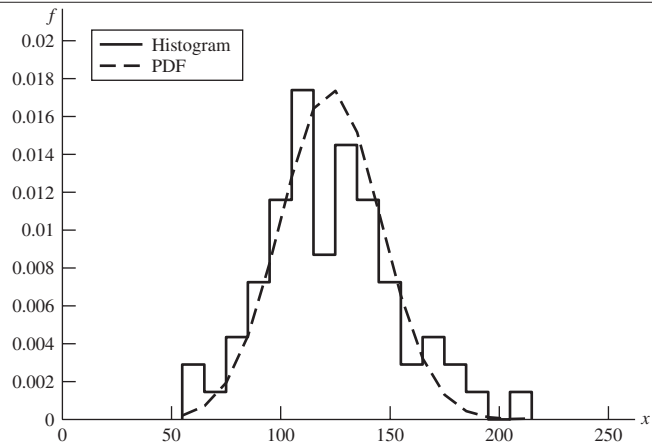
$$\begin{aligned} x_{10} &= 122.9 + 30.3(-1.282) \\ &= 84.1 \text{ kcycles} \quad \text{Ans.} \end{aligned}$$

20-20

x	f	fx	fx^2	x	$f/(Nw)$	$f(x)$
60	2	120	7200	60	0.002899	0.000399
70	1	70	4900	70	0.001449	0.001206
80	3	240	19200	80	0.004348	0.003009
90	5	450	40500	90	0.007246	0.006204
100	8	800	80000	100	0.011594	0.010567
110	12	1320	145200	110	0.017391	0.014871
120	6	720	86400	120	0.008696	0.017292
130	10	1300	169000	130	0.014493	0.016612
140	8	1120	156800	140	0.011594	0.013185
150	5	750	112500	150	0.007246	0.008647
160	2	320	51200	160	0.002899	0.004685
170	3	510	86700	170	0.004348	0.002097
180	2	360	64800	180	0.002899	0.000776
190	1	190	36100	190	0.001449	0.000237
200	0	0	0	200	0	5.98E-05
210	1	210	44100	210	0.001449	1.25E-05
	69	8480				

$$\bar{x} = 122.8986 \quad s_x = 22.88719$$

x	$f/(Nw)$	$f(x)$	x	$f/(Nw)$	$f(x)$
55	0	0.000214	145	0.011594	0.010935
55	0.002899	0.000214	145	0.007246	0.010935
65	0.002899	0.000711	155	0.007246	0.006518
65	0.001449	0.000711	155	0.002899	0.006518
75	0.001449	0.001951	165	0.002899	0.00321
75	0.004348	0.001951	165	0.004348	0.00321
85	0.004348	0.004425	175	0.004348	0.001306
85	0.007246	0.004425	175	0.002899	0.001306
95	0.007246	0.008292	185	0.002899	0.000439
95	0.011594	0.008292	185	0.001449	0.000439
105	0.011594	0.012839	195	0.001449	0.000122
105	0.017391	0.012839	195	0	0.000122
115	0.017391	0.016423	205	0	2.8E-05
115	0.008696	0.016423	205	0.001499	2.8E-05
125	0.008696	0.017357	215	0.001499	5.31E-06
125	0.014493	0.017357	215	0	5.31E-06
135	0.014493	0.015157			
135	0.011594	0.015157			

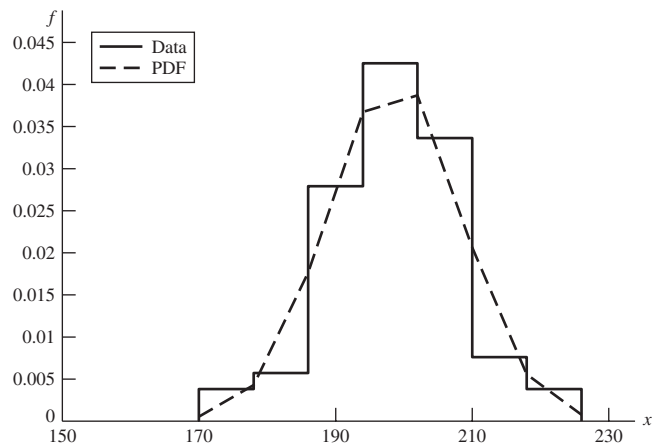


20-21

x	f	fx	fx^2	$f/(Nw)$	$f(x)$
174	6	1044	181 656	0.003 807	0.001 642
182	9	1638	298 116	0.005 711	0.009 485
190	44	8360	1 588 400	0.027 919	0.027 742
198	67	13 266	2 626 668	0.042 513	0.041 068
206	53	10 918	2 249 108	0.033 629	0.030 773
214	12	2 568	549 552	0.007 614	0.011 671
222	6	1 332	295 704	0.003 807	0.002 241
1386	197	39 126	7 789 204		

$$\bar{x} = 198.6091 \quad s_x = 9.695 071$$

x	$f/(Nw)$	$f(x)$
170	0	0.000 529
170	0.003 807	0.000 529
178	0.003 807	0.004 297
178	0.005 711	0.004 297
186	0.005 711	0.017 663
186	0.027 919	0.017 663
194	0.027 919	0.036 752
194	0.042 513	0.036 752
202	0.042 513	0.038 708
202	0.033 629	0.038 708
210	0.033 629	0.020 635
210	0.007 614	0.020 635
218	0.007 614	0.005 568
218	0.003 807	0.005 568
226	0.003 807	0.000 76
226	0	0.000 76

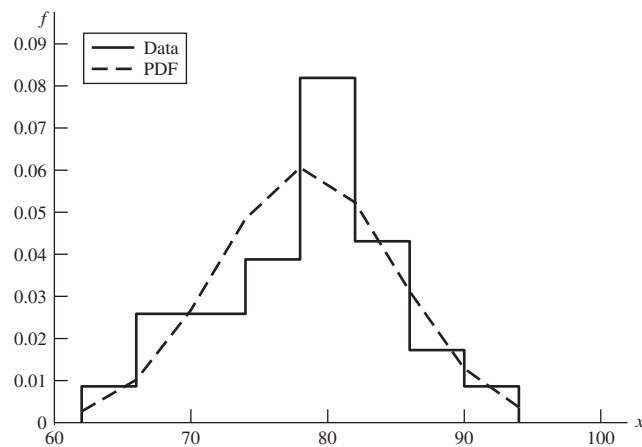


20-22

x	f	fx	fx^2	$f/(Nw)$	$f(x)$
64	2	128	8192	0.008 621	0.005 48
68	6	408	27 744	0.025 862	0.017 299
72	6	432	31 104	0.025 862	0.037 705
76	9	684	51 984	0.038 793	0.056 742
80	19	1520	121 600	0.081 897	0.058 959
84	10	840	70 560	0.043 103	0.042 298
88	4	352	30 976	0.017 241	0.020 952
92	2	184	16 928	0.008 621	0.007 165
624	58	4548	359 088		

$$\bar{x} = 78.41379 \quad s_x = 6.572229$$

x	$f/(Nw)$	$f(x)$	x	$f/(Nw)$	$f(x)$
62	0	0.002 684	82	0.081 897	0.052 305
62	0.008 621	0.002 684	82	0.043 103	0.052 305
66	0.008 621	0.010 197	86	0.043 103	0.031 18
66	0.025 862	0.010 197	86	0.017 241	0.031 18
70	0.025 862	0.026 749	90	0.017 241	0.012 833
70	0.025 862	0.026 749	90	0.008 621	0.012 833
74	0.025 862	0.048 446	94	0.008 621	0.003 647
74	0.038 793	0.048 446	94	0	0.003 647
78	0.038 793	0.060 581			
78	0.081 897	0.060 581			



20-23

$$\bar{\sigma} = \frac{4\bar{P}}{\pi d^2} = \frac{4(40)}{\pi(1^2)} = 50.93 \text{ kpsi}$$

$$\hat{\sigma}_{\sigma} = \frac{4\hat{\sigma}_P}{\pi d^2} = \frac{4(8.5)}{\pi(1^2)} = 10.82 \text{ kpsi}$$

$$\hat{\sigma}_{s_y} = 5.9 \text{ kpsi}$$

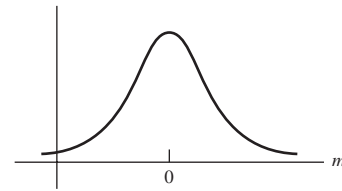
For no yield, $m = S_y - \sigma \geq 0$

$$z = \frac{m - \mu_m}{\hat{\sigma}_m} = \frac{0 - \mu_m}{\hat{\sigma}_m} = -\frac{\mu_m}{\hat{\sigma}_m}$$

$$\mu_m = \bar{S}_y - \bar{\sigma} = 27.47 \text{ kpsi,}$$

$$\hat{\sigma}_m = \left(\hat{\sigma}_\sigma^2 + \hat{\sigma}_{S_y}^2 \right)^{1/2} = 12.32 \text{ kpsi}$$

$$z = \frac{-27.47}{12.32} = -2.230$$



From Table A-10, $p_f = 0.0129$

$$R = 1 - p_f = 1 - 0.0129 = 0.987 \quad \text{Ans.}$$

20-24 For a lognormal distribution,

$$\text{Eq. (20-18)} \quad \mu_y = \ln \mu_x - \ln \sqrt{1 + C_x^2}$$

$$\text{Eq. (20-19)} \quad \hat{\sigma}_y = \sqrt{\ln(1 + C_x^2)}$$

From Prob. (20-23)

$$\mu_m = \bar{S}_y - \bar{\sigma} = \mu_x$$

$$\mu_y = \left(\ln \bar{S}_y - \ln \sqrt{1 + C_{S_y}^2} \right) - \left(\ln \bar{\sigma} - \ln \sqrt{1 + C_\sigma^2} \right)$$

$$= \ln \left[\frac{\bar{S}_y}{\bar{\sigma}} \sqrt{\frac{1 + C_\sigma^2}{1 + C_{S_y}^2}} \right]$$

$$\hat{\sigma}_y = \left[\ln \left(1 + C_{S_y}^2 \right) + \ln \left(1 + C_\sigma^2 \right) \right]^{1/2}$$

$$= \sqrt{\ln \left[\left(1 + C_{S_y}^2 \right) \left(1 + C_\sigma^2 \right) \right]}$$

$$z = -\frac{\mu}{\hat{\sigma}} = -\frac{\ln \left(\frac{\bar{S}_y}{\bar{\sigma}} \sqrt{\frac{1 + C_\sigma^2}{1 + C_{S_y}^2}} \right)}{\sqrt{\ln \left[\left(1 + C_{S_y}^2 \right) \left(1 + C_\sigma^2 \right) \right]}}$$

$$\bar{\sigma} = \frac{4\bar{P}}{\pi d^2} = \frac{4(30)}{\pi(1^2)} = 38.197 \text{ kpsi}$$

$$\hat{\sigma}_\sigma = \frac{4\hat{\sigma}_P}{\pi d^2} = \frac{4(5.1)}{\pi(1^2)} = 6.494 \text{ kpsi}$$

$$C_\sigma = \frac{6.494}{38.197} = 0.1700$$

$$C_{S_y} = \frac{3.81}{49.6} = 0.07681$$

$$z = -\frac{\ln \left[\frac{49.6}{38.197} \sqrt{\frac{1 + 0.170^2}{1 + 0.07681^2}} \right]}{\sqrt{\ln[(1 + 0.07681^2)(1 + 0.170^2)]}} = -1.470$$

From Table A-10

$$p_f = 0.0708$$

$$R = 1 - p_f = 0.929 \quad \text{Ans.}$$

20-25

x	n	nx	nx^2
93	19	1767	164 311
95	25	2375	225 625
97	38	3685	357 542
99	17	1683	166 617
101	12	1212	122 412
103	10	1030	106 090
105	5	525	55 125
107	4	428	45 796
109	4	436	47 524
111	2	222	24 624
	136	13 364	1315 704

$$\bar{x} = 13\,364/136 = 98.26 \text{ kpsi}$$

$$s_x = \left(\frac{1\,315\,704 - 13\,364^2/136}{135} \right)^{1/2} = 4.30 \text{ kpsi}$$

Under normal hypothesis,

$$z_{0.01} = (x_{0.01} - 98.26)/4.30$$

$$x_{0.01} = 98.26 + 4.30z_{0.01}$$

$$= 98.26 + 4.30(-2.3267)$$

$$= 88.26 \doteq 88.3 \text{ kpsi} \quad \text{Ans.}$$

20-26 From Prob. 20-25, $\mu_x = 98.26$ kpsi, and $\hat{\sigma}_x = 4.30$ kpsi.

$$C_x = \hat{\sigma}_x/\mu_x = 4.30/98.26 = 0.043\,76$$

From Eqs. (20-18) and (20-19),

$$\mu_y = \ln(98.26) - 0.043\,76^2/2 = 4.587$$

$$\hat{\sigma}_y = \sqrt{\ln(1 + 0.043\,76^2)} = 0.043\,74$$

For a yield strength exceeded by 99% of the population,

$$z_{0.01} = (\ln x_{0.01} - \mu_y)/\hat{\sigma}_y \Rightarrow \ln x_{0.01} = \mu_y + \hat{\sigma}_y z_{0.01}$$

From Table A-10, for 1% failure, $z_{0.01} = -2.326$. Thus,

$$\ln x_{0.01} = 4.587 + 0.04374(-2.326) = 4.485$$

$$x_{0.01} = 88.7 \text{ kpsi} \quad \text{Ans.}$$

The normal PDF is given by Eq. (20-14) as

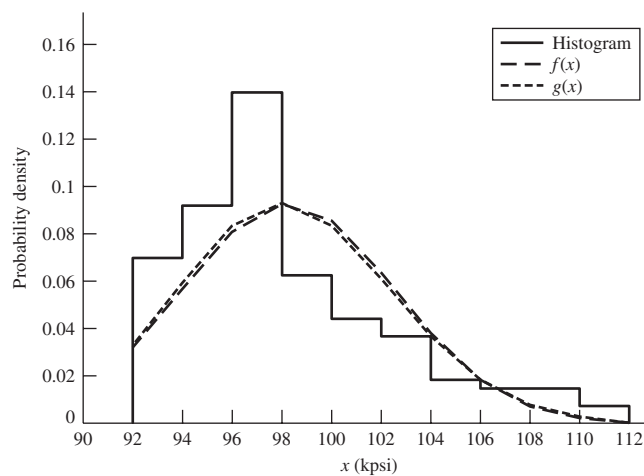
$$f(x) = \frac{1}{4.30\sqrt{2\pi}} \exp \left[-\frac{1}{2} \left(\frac{x - 98.26}{4.30} \right)^2 \right]$$

For the lognormal distribution, from Eq. (20-17), defining $g(x)$,

$$g(x) = \frac{1}{x(0.04374)\sqrt{2\pi}} \exp \left[-\frac{1}{2} \left(\frac{\ln x - 4.587}{0.04374} \right)^2 \right]$$

x (kpsi)	$f/(Nw)$	$f(x)$	$g(x)$	x (kpsi)	$f/(Nw)$	$f(x)$	$g(x)$
92	0.00000	0.03215	0.03263	102	0.03676	0.06356	0.06134
92	0.06985	0.03215	0.03263	104	0.03676	0.03806	0.03708
94	0.06985	0.05680	0.05890	104	0.01838	0.03806	0.03708
94	0.09191	0.05680	0.05890	106	0.01838	0.01836	0.01869
96	0.09191	0.08081	0.08308	106	0.01471	0.01836	0.01869
96	0.13971	0.08081	0.08308	108	0.01471	0.00713	0.00793
98	0.13971	0.09261	0.09297	108	0.01471	0.00713	0.00793
98	0.06250	0.09261	0.09297	110	0.01471	0.00223	0.00286
100	0.06250	0.08548	0.08367	110	0.00735	0.00223	0.00286
100	0.04412	0.08548	0.08367	112	0.00735	0.00056	0.00089
102	0.04412	0.06356	0.06134	112	0.00000	0.00056	0.00089

Note: rows are repeated to draw histogram



The normal and lognormal are almost the same. However the data is quite skewed and perhaps a Weibull distribution should be explored. For a method of establishing the

Weibull parameters see Shigley, J. E., and C. R. Mischke, *Mechanical Engineering Design*, McGraw-Hill, 5th ed., 1989, Sec. 4-12.

20-27 Let $x = (S'_{fe})_{10^4}$

$$x_0 = 79 \text{ kpsi}, \quad \theta = 86.2 \text{ kpsi}, \quad b = 2.6$$

Eq. (20-28)

$$\begin{aligned}\bar{x} &= x_0 + (\theta - x_0)\Gamma(1 + 1/b) \\ \bar{x} &= 79 + (86.2 - 79)\Gamma(1 + 1/2.6) \\ &= 79 + 7.2\Gamma(1.38)\end{aligned}$$

From Table A-34, $\Gamma(1.38) = 0.88854$

$$\bar{x} = 79 + 7.2(0.88854) = 85.4 \text{ kpsi} \quad \text{Ans.}$$

Eq. (20-29)

$$\begin{aligned}\hat{\sigma}_x &= (\theta - x_0)[\Gamma(1 + 2/b) - \Gamma^2(1 + 1/b)]^{1/2} \\ &= (86.2 - 79)[\Gamma(1 + 2/2.6) - \Gamma^2(1 + 1/2.6)]^{1/2} \\ &= 7.2[0.92376 - 0.88854^2]^{1/2} \\ &= 2.64 \text{ kpsi} \quad \text{Ans.}\end{aligned}$$

$$C_x = \frac{\hat{\sigma}_x}{\bar{x}} = \frac{2.64}{85.4} = 0.031 \quad \text{Ans.}$$

20-28

$$x = S_{ut}$$

$$x_0 = 27.7, \quad \theta = 46.2, \quad b = 4.38$$

$$\begin{aligned}\mu_x &= 27.7 + (46.2 - 27.7)\Gamma(1 + 1/4.38) \\ &= 27.7 + 18.5\Gamma(1.23) \\ &= 27.7 + 18.5(0.91075) \\ &= 44.55 \text{ kpsi} \quad \text{Ans.}\end{aligned}$$

$$\begin{aligned}\hat{\sigma}_x &= (46.2 - 27.7)[\Gamma(1 + 2/4.38) - \Gamma^2(1 + 1/4.38)]^{1/2} \\ &= 18.5[\Gamma(1.46) - \Gamma^2(1.23)]^{1/2} \\ &= 18.5[0.8856 - 0.91075^2]^{1/2} \\ &= 4.38 \text{ kpsi} \quad \text{Ans.}\end{aligned}$$

$$C_x = \frac{4.38}{44.55} = 0.098 \quad \text{Ans.}$$

From the Weibull survival equation

$$R = \exp \left[- \left(\frac{x - x_0}{\theta - x_0} \right)^b \right] = 1 - p$$

$$R_{40} = \exp \left[- \left(\frac{x_{40} - x_0}{\theta - x_0} \right)^b \right] = 1 - p_{40}$$

$$= \exp \left[- \left(\frac{40 - 27.7}{46.2 - 27.7} \right)^{4.38} \right] = 0.846$$

$$p_{40} = 1 - R_{40} = 1 - 0.846 = 0.154 = 15.4\% \quad \text{Ans.}$$

20-29

$$\mathbf{x} = \mathbf{S}_{ut}$$

$$x_0 = 151.9, \theta = 193.6, b = 8$$

$$\mu_x = 151.9 + (193.6 - 151.9)\Gamma(1 + 1/8)$$

$$= 151.9 + 41.7\Gamma(1.125)$$

$$= 151.9 + 41.7(0.94176)$$

$$= 191.2 \text{ kpsi} \quad \text{Ans.}$$

$$\hat{\sigma}_x = (193.6 - 151.9)[\Gamma(1 + 2/8) - \Gamma^2(1 + 1/8)]^{1/2}$$

$$= 41.7[\Gamma(1.25) - \Gamma^2(1.125)]^{1/2}$$

$$= 41.7[0.90640 - 0.94176^2]^{1/2}$$

$$= 5.82 \text{ kpsi} \quad \text{Ans.}$$

$$C_x = \frac{5.82}{191.2} = 0.030$$

20-30

$$\mathbf{x} = \mathbf{S}_{ut}$$

$$x_0 = 47.6, \theta = 125.6, b = 11.84$$

$$\bar{x} = 47.6 + (125.6 - 47.6)\Gamma(1 + 1/11.84)$$

$$\bar{x} = 47.6 + 78\Gamma(1.08)$$

$$= 47.6 + 78(0.95973) = 122.5 \text{ kpsi}$$

$$\hat{\sigma}_x = (125.6 - 47.6)[\Gamma(1 + 2/11.84) - \Gamma^2(1 + 1/11.84)]^{1/2}$$

$$= 78[\Gamma(1.08) - \Gamma^2(1.17)]^{1/2}$$

$$= 78(0.95973 - 0.93670^2)^{1/2}$$

$$= 22.4 \text{ kpsi}$$

From Prob. 20-28

$$p = 1 - \exp \left[- \left(\frac{x - x_0}{\theta - x_0} \right)^b \right]$$

$$= 1 - \exp \left[- \left(\frac{100 - 47.6}{125.6 - 47.6} \right)^{11.84} \right]$$

$$= 0.0090 \quad \text{Ans.}$$

$$y = S_y$$

$$y_0 = 64.1, \theta = 81.0, b = 3.77$$

$$\begin{aligned}\bar{y} &= 64.1 + (81.0 - 64.1)\Gamma(1 + 1/3.77) \\ &= 64.1 + 16.9\Gamma(1.27) \\ &= 64.1 + 16.9(0.90250) \\ &= 79.35 \text{ kpsi}\end{aligned}$$

$$\begin{aligned}\sigma_y &= (81 - 64.1)[\Gamma(1 + 2/3.77) - \Gamma(1 + 1/3.77)]^{1/2} \\ \sigma_y &= 16.9[(0.88757) - 0.90250^2]^{1/2} \\ &= 4.57 \text{ kpsi}\end{aligned}$$

$$p = 1 - \exp\left[-\left(\frac{y - y_0}{\theta - y_0}\right)^{3.77}\right]$$

$$p = 1 - \exp\left[-\left(\frac{70 - 64.1}{81 - 64.1}\right)^{3.77}\right] = 0.019 \quad \text{Ans.}$$

20-31 $x = S_{ut} = \mathbf{W}[122.3, 134.6, 3.64]$ kpsi, $p(x > 120) = 1 = 100\%$ since $x_0 > 120$ kpsi

$$\begin{aligned}p(x > 133) &= \exp\left[-\left(\frac{133 - 122.3}{134.6 - 122.3}\right)^{3.64}\right] \\ &= 0.548 = 54.8\% \quad \text{Ans.}\end{aligned}$$

20-32 Using Eqs. (20-28) and (20-29) and Table A-34,

$$\mu_n = n_0 + (\theta - n_0)\Gamma(1 + 1/b) = 36.9 + (133.6 - 36.9)\Gamma(1 + 1/2.66) = 122.85 \text{ kcycles}$$

$$\hat{\sigma}_n = (\theta - n_0)[\Gamma(1 + 2/b) - \Gamma^2(1 + 1/b)] = 34.79 \text{ kcycles}$$

For the Weibull density function, Eq. (2-27),

$$f_W(n) = \frac{2.66}{133.6 - 36.9} \left(\frac{n - 36.9}{133.6 - 36.9}\right)^{2.66-1} \exp\left[-\left(\frac{n - 36.9}{133.6 - 36.9}\right)^{2.66}\right]$$

For the lognormal distribution, Eqs. (20-18) and (20-19) give,

$$\mu_y = \ln(122.85) - (34.79/122.85)^2/2 = 4.771$$

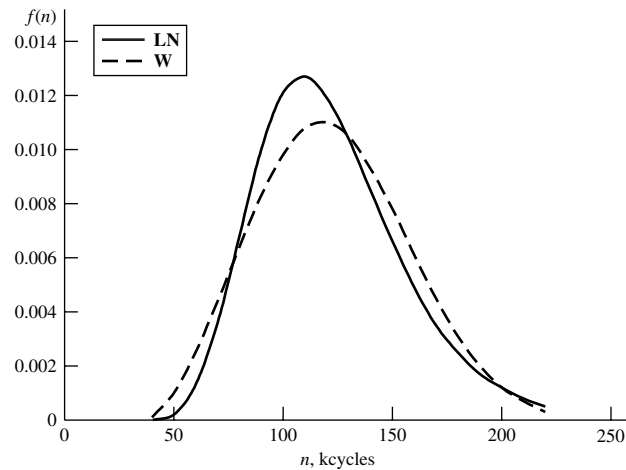
$$\hat{\sigma}_y = \sqrt{[1 + (34.79/122.85)^2]} = 0.2778$$

From Eq. (20-17), the lognormal PDF is

$$f_{LN}(n) = \frac{1}{0.2778 n \sqrt{2\pi}} \exp\left[-\frac{1}{2} \left(\frac{\ln n - 4.771}{0.2778}\right)^2\right]$$

We form a table of densities $f_W(n)$ and $f_{LN}(n)$ and plot.

n (kcycles)	$f_W(n)$	$f_{LN}(n)$
40	9.1E-05	1.82E-05
50	0.000991	0.000241
60	0.002498	0.001233
70	0.004380	0.003501
80	0.006401	0.006739
90	0.008301	0.009913
100	0.009822	0.012022
110	0.010750	0.012644
120	0.010965	0.011947
130	0.010459	0.010399
140	0.009346	0.008492
150	0.007827	0.006597
160	0.006139	0.004926
170	0.004507	0.003564
180	0.003092	0.002515
190	0.001979	0.001739
200	0.001180	0.001184
210	0.000654	0.000795
220	0.000336	0.000529



The Weibull L10 life comes from Eq. (20-26) with a reliability of $R = 0.90$. Thus,

$$n_{0.10} = 36.9 + (133 - 36.9)[\ln(1/0.90)]^{1/2.66} = 78.1 \text{ kcycles} \quad \text{Ans.}$$

The lognormal L10 life comes from the definition of the z variable. That is,

$$\ln n_0 = \mu_y + \hat{\sigma}_y z \quad \text{or} \quad n_0 = \exp(\mu_y + \hat{\sigma}_y z)$$

From Table A-10, for $R = 0.90$, $z = -1.282$. Thus,

$$n_0 = \exp[4.771 + 0.2778(-1.282)] = 82.7 \text{ kcycles} \quad \text{Ans.}$$

20-33 Form a table

i	x $L(10^{-5})$	f_i	$f_i x(10^{-5})$	$f_i x^2(10^{-10})$	$g(x)$ (10^5)
1	3.05	3	9.15	27.9075	0.0557
2	3.55	7	24.85	88.2175	0.1474
3	4.05	11	44.55	180.4275	0.2514
4	4.55	16	72.80	331.24	0.3168
5	5.05	21	106.05	535.5525	0.3216
6	5.55	13	72.15	400.4325	0.2789
7	6.05	13	78.65	475.8325	0.2151
8	6.55	6	39.30	257.415	0.1517
9	7.05	2	14.10	99.405	0.1000
10	7.55	0	0	0	0.0625
11	8.05	4	32.20	259.21	0.0375
12	8.55	3	25.65	219.3075	0.0218
13	9.05	0	0	0	0.0124
14	9.55	0	0	0	0.0069
15	10.05	1	10.05	101.0025	0.0038
		100	529.50	2975.95	

$$\bar{x} = 529.5(10^5)/100 = 5.295(10^5) \text{ cycles } \textit{Ans.}$$

$$s_x = \left[\frac{2975.95(10^{10}) - [529.5(10^5)]^2/100}{100 - 1} \right]^{1/2}$$

$$= 1.319(10^5) \text{ cycles } \textit{Ans.}$$

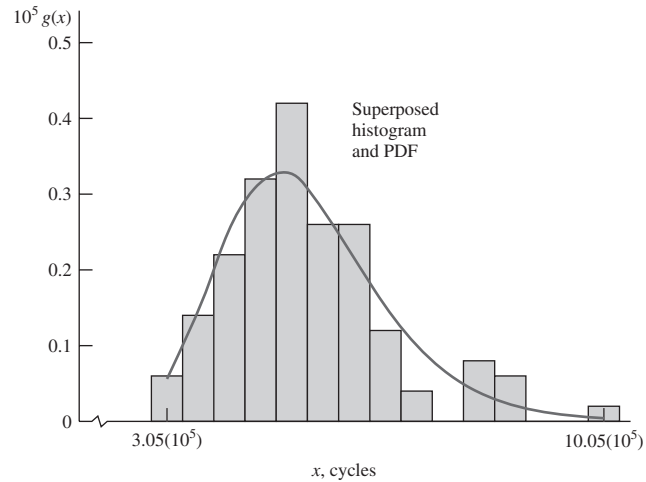
$$C_x = s/\bar{x} = 1.319/5.295 = 0.249$$

$$\mu_y = \ln 5.295(10^5) - 0.249^2/2 = 13.149$$

$$\hat{\sigma}_y = \sqrt{\ln(1 + 0.249^2)} = 0.245$$

$$g(x) = \frac{1}{x\hat{\sigma}_y\sqrt{2\pi}} \exp \left[-\frac{1}{2} \left(\frac{\ln x - \mu_y}{\hat{\sigma}_y} \right)^2 \right]$$

$$g(x) = \frac{1.628}{x} \exp \left[-\frac{1}{2} \left(\frac{\ln x - 13.149}{0.245} \right)^2 \right]$$

**20-34**

$$\mathbf{x} = \mathbf{S}_u = \mathbf{W}[70.3, 84.4, 2.01]$$

$$\begin{aligned} \text{Eq. (20-28)} \quad \mu_x &= 70.3 + (84.4 - 70.3)\Gamma(1 + 1/2.01) \\ &= 70.3 + (84.4 - 70.3)\Gamma(1.498) \\ &= 70.3 + (84.4 - 70.3)0.88617 \\ &= 82.8 \text{ kpsi} \quad \text{Ans.} \end{aligned}$$

$$\begin{aligned} \text{Eq. (20-29)} \quad \hat{\sigma}_x &= (84.4 - 70.3)[\Gamma(1 + 2/2.01) - \Gamma^2(1 + 1/2.01)]^{1/2} \\ \hat{\sigma}_x &= 14.1[0.99791 - 0.88617^2]^{1/2} \\ &= 6.502 \text{ kpsi} \end{aligned}$$

$$C_x = \frac{6.502}{82.8} = 0.079 \quad \text{Ans.}$$

20-35 Take the Weibull equation for the standard deviation

$$\hat{\sigma}_x = (\theta - x_0)[\Gamma(1 + 2/b) - \Gamma^2(1 + 1/b)]^{1/2}$$

and the mean equation solved for $\bar{x} - x_0$

$$\bar{x} - x_0 = (\theta - x_0)\Gamma(1 + 1/b)$$

Dividing the first by the second,

$$\frac{\hat{\sigma}_x}{\bar{x} - x_0} = \frac{[\Gamma(1 + 2/b) - \Gamma^2(1 + 1/b)]^{1/2}}{\Gamma(1 + 1/b)}$$

$$\frac{4.2}{49 - 33.8} = \sqrt{\frac{\Gamma(1 + 2/b)}{\Gamma^2(1 + 1/b)} - 1} = \sqrt{R} = 0.2763$$

Make a table and solve for b iteratively

b	$1 + 2/b$	$1 + 1/b$	$\Gamma(1 + 2/b)$	$\Gamma(1 + 1/b)$	
3	1.67	1.33	0.90330	0.89338	0.363
4	1.5	1.25	0.88623	0.90640	0.280
4.1	1.49	1.24	0.88595	0.90852	0.271

$b \doteq 4.068$ Using MathCad *Ans.*

$$\theta = x_0 + \frac{\bar{x} - x_0}{\Gamma(1 + 1/b)} = 33.8 + \frac{49 - 33.8}{\Gamma(1 + 1/4.068)}$$

$$= 49.8 \text{ kpsi } \textit{Ans.}$$

20-36

$$\mathbf{x} = \mathbf{S}_y = \mathbf{W}[34.7, 39, 2.93] \text{ kpsi}$$

$$\bar{x} = 34.7 + (39 - 34.7)\Gamma(1 + 1/2.93)$$

$$= 34.7 + 4.3\Gamma(1.34)$$

$$= 34.7 + 4.3(0.89222) = 38.5 \text{ kpsi}$$

$$\hat{\sigma}_x = (39 - 34.7)[\Gamma(1 + 2/2.93) - \Gamma^2(1 + 1/2.93)]^{1/2}$$

$$= 4.3[\Gamma(1.68) - \Gamma^2(1.34)]^{1/2}$$

$$= 4.3[0.90500 - 0.89222^2]^{1/2}$$

$$= 1.42 \text{ kpsi } \textit{Ans.}$$

$$C_x = 1.42/38.5 = 0.037 \textit{ Ans.}$$

20-37

x (Mrev)	f	fx	fx^2
1	11	11	11
2	22	44	88
3	38	114	342
4	57	228	912
5	31	155	775
6	19	114	684
7	15	105	735
8	12	96	768
9	11	99	891
10	9	90	900
11	7	77	847
12	5	60	720
Sum	78	237	7673

$$\mu_x = 1193(10^6)/237 = 5.034(10^6) \text{ cycles}$$

$$\hat{\sigma}_x = \sqrt{\frac{7673(10^{12}) - [1193(10^6)]^2/237}{237 - 1}} = 2.658(10^6) \text{ cycles}$$

$$C_x = 2.658/5.034 = 0.528$$

From Eqs. (20-18) and (20-19),

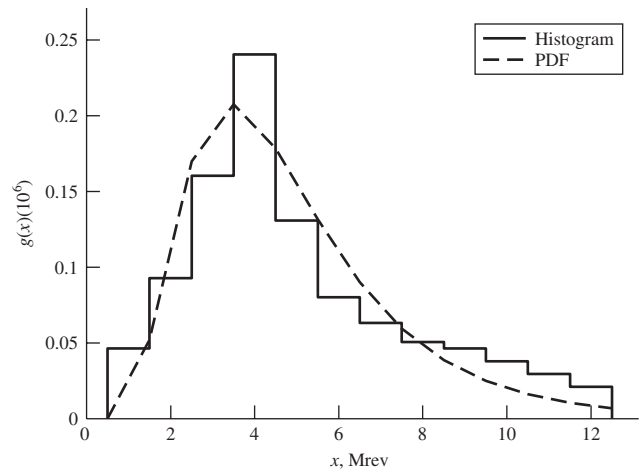
$$\mu_y = \ln[5.034(10^6)] - 0.528^2/2 = 15.292$$

$$\hat{\sigma}_y = \sqrt{\ln(1 + 0.528^2)} = 0.496$$

From Eq. (20-17), defining $g(x)$,

$$g(x) = \frac{1}{x(0.496)\sqrt{2\pi}} \exp \left[-\frac{1}{2} \left(\frac{\ln x - 15.292}{0.496} \right)^2 \right]$$

x (Mrev)	$f/(Nw)$	$g(x) \cdot (10^6)$
0.5	0.00000	0.00011
0.5	0.04641	0.00011
1.5	0.04641	0.05204
1.5	0.09283	0.05204
2.5	0.09283	0.16992
2.5	0.16034	0.16992
3.5	0.16034	0.20754
3.5	0.24051	0.20754
4.5	0.24051	0.17848
4.5	0.13080	0.17848
5.5	0.13080	0.13158
5.5	0.08017	0.13158
6.5	0.08017	0.09011
6.5	0.06329	0.09011
7.5	0.06329	0.05953
7.5	0.05063	0.05953
8.5	0.05063	0.03869
8.5	0.04641	0.03869
9.5	0.04641	0.02501
9.5	0.03797	0.02501
10.5	0.03797	0.01618
10.5	0.02954	0.01618
11.5	0.02954	0.01051
11.5	0.02110	0.01051
12.5	0.02110	0.00687
12.5	0.00000	0.00687



$$z = \frac{\ln x - \mu_y}{\hat{\sigma}_y} \Rightarrow \ln x = \mu_y + \hat{\sigma}_y z = 15.292 + 0.496z$$

L_{10} life, where 10% of bearings fail, from Table A-10, $z = -1.282$. Thus,

$$\ln x = 15.292 + 0.496(-1.282) = 14.66$$

$$\therefore x = 2.32 \times 10^6 \text{ rev } \textit{Ans.}$$